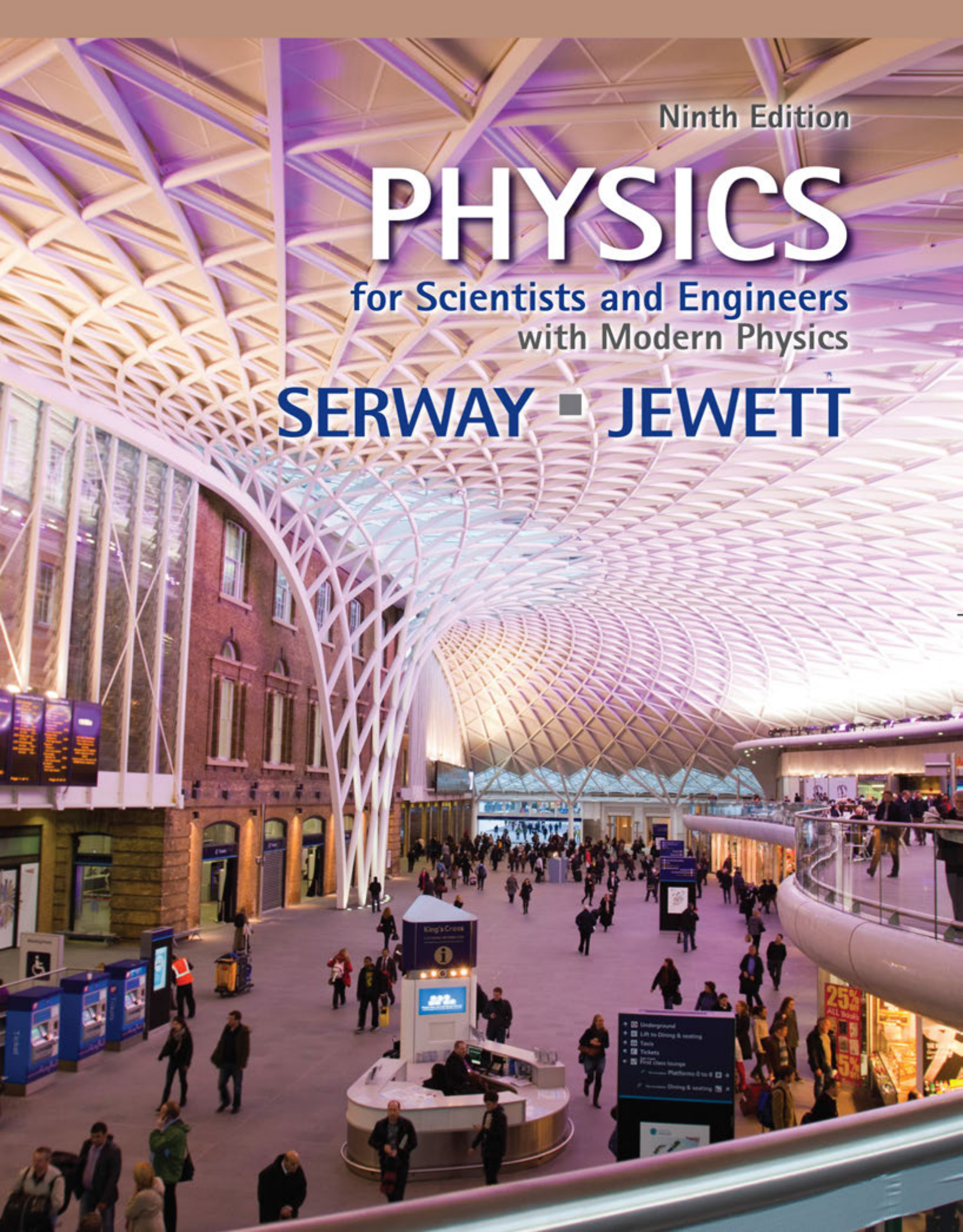


Ninth Edition

PHYSICS

for Scientists and Engineers
with Modern Physics


SERWAY ■ **JEWETT**





Pedagogical Color Chart

Mechanics and Thermodynamics

Displacement and position vectors 


Displacement and position component vectors 

Linear (\vec{v}) and angular ($\vec{\omega}$) velocity vectors 

Velocity component vectors 

Force vectors (\vec{F}) 

Force component vectors 

Acceleration vectors (\vec{a}) 


Acceleration component vectors 


Energy transfer arrows  W_{eng}

 Q_c

 Q_h


Process arrow 


Linear (\vec{p}) and angular (\vec{L}) momentum vectors 

Linear and angular momentum component vectors 

Torque vectors ($\vec{\tau}$) 

Torque component vectors 

Schematic linear or rotational motion directions 

Dimensional rotational arrow 

Enlargement arrow 

Springs 

Pulleys 

Electricity and Magnetism

Electric fields 

Electric field vectors 

Electric field component vectors 

Magnetic fields 

Magnetic field vectors 

Magnetic field component vectors 

Positive charges 


Negative charges 

Resistors 

Batteries and other DC power supplies 

Switches 

Capacitors 


Inductors (coils) 

Voltmeters 

Ammeters 

AC Sources 

Lightbulbs 

Ground symbol 

Current 


Light and Optics

Light ray 

Focal light ray 

Central light ray 

Converging lens 

Diverging lens 

Mirror 

Curved mirror 

Objects 

Images 

Some Physical Constants

Quantity	Symbol	Value ^a
Atomic mass unit	u	$1.660\,538\,782\,(83) \times 10^{-27}$ kg $931.494\,028\,(23)$ MeV/ c^2
Avogadro's number	N_A	$6.022\,141\,79\,(30) \times 10^{23}$ particles/mol
Bohr magneton	$\mu_B = \frac{e\hbar}{2m_e}$	$9.274\,009\,15\,(23) \times 10^{-24}$ J/T
Bohr radius	$a_0 = \frac{\hbar^2}{m_e e^2 k_e}$	$5.291\,772\,085\,9\,(36) \times 10^{-11}$ m
Boltzmann's constant	$k_B = \frac{R}{N_A}$	$1.380\,650\,4\,(24) \times 10^{-23}$ J/K
Compton wavelength	$\lambda_C = \frac{h}{m_e c}$	$2.426\,310\,217\,5\,(33) \times 10^{-12}$ m
Coulomb constant	$k_e = \frac{1}{4\pi\epsilon_0}$	$8.987\,551\,788 \dots \times 10^9$ N·m ² /C ² (exact)
Deuteron mass	m_d	$3.343\,583\,20\,(17) \times 10^{-27}$ kg $2.013\,553\,212\,724\,(78)$ u
Electron mass	m_e	$9.109\,382\,15\,(45) \times 10^{-31}$ kg $5.485\,799\,094\,3\,(23) \times 10^{-4}$ u $0.510\,998\,910\,(13)$ MeV/ c^2
Electron volt	eV	$1.602\,176\,487\,(40) \times 10^{-19}$ J
Elementary charge	e	$1.602\,176\,487\,(40) \times 10^{-19}$ C
Gas constant	R	$8.314\,472\,(15)$ J/mol·K
Gravitational constant	G	$6.674\,28\,(67) \times 10^{-11}$ N·m ² /kg ²
Neutron mass	m_n	$1.674\,927\,211\,(84) \times 10^{-27}$ kg $1.008\,664\,915\,97\,(43)$ u $939.565\,346\,(23)$ MeV/ c^2
Nuclear magneton	$\mu_n = \frac{e\hbar}{2m_p}$	$5.050\,783\,24\,(13) \times 10^{-27}$ J/T
Permeability of free space	μ_0	$4\pi \times 10^{-7}$ T·m/A (exact)
Permittivity of free space	$\epsilon_0 = \frac{1}{\mu_0 c^2}$	$8.854\,187\,817 \dots \times 10^{-12}$ C ² /N·m ² (exact)
Planck's constant	h	$6.626\,068\,96\,(33) \times 10^{-34}$ J·s
	$\hbar = \frac{h}{2\pi}$	$1.054\,571\,628\,(53) \times 10^{-34}$ J·s
Proton mass	m_p	$1.672\,621\,637\,(83) \times 10^{-27}$ kg $1.007\,276\,466\,77\,(10)$ u $938.272\,013\,(23)$ MeV/ c^2
Rydberg constant	R_H	$1.097\,373\,156\,852\,7\,(73) \times 10^7$ m ⁻¹
Speed of light in vacuum	c	$2.997\,924\,58 \times 10^8$ m/s (exact)

Note: These constants are the values recommended in 2006 by CODATA, based on a least-squares adjustment of data from different measurements. For a more complete list, see P. J. Mohr, B. N. Taylor, and D. B. Newell, "CODATA Recommended Values of the Fundamental Physical Constants: 2006." *Rev. Mod. Phys.* **80**:2, 633–730, 2008.

^aThe numbers in parentheses for the values represent the uncertainties of the last two digits.

Solar System Data

Body	Mass (kg)	Mean Radius (m)	Period (s)	Mean Distance from the Sun (m)
Mercury	3.30×10^{23}	2.44×10^6	7.60×10^6	5.79×10^{10}
Venus	4.87×10^{24}	6.05×10^6	1.94×10^7	1.08×10^{11}
Earth	5.97×10^{24}	6.37×10^6	3.156×10^7	1.496×10^{11}
Mars	6.42×10^{23}	3.39×10^6	5.94×10^7	2.28×10^{11}
Jupiter	1.90×10^{27}	6.99×10^7	3.74×10^8	7.78×10^{11}
Saturn	5.68×10^{26}	5.82×10^7	9.29×10^8	1.43×10^{12}
Uranus	8.68×10^{25}	2.54×10^7	2.65×10^9	2.87×10^{12}
Neptune	1.02×10^{26}	2.46×10^7	5.18×10^9	4.50×10^{12}
Pluto ^a	1.25×10^{22}	1.20×10^6	7.82×10^9	5.91×10^{12}
Moon	7.35×10^{22}	1.74×10^6	—	—
Sun	1.989×10^{30}	6.96×10^8	—	—

^aIn August 2006, the International Astronomical Union adopted a definition of a planet that separates Pluto from the other eight planets. Pluto is now defined as a “dwarf planet” (like the asteroid Ceres).

Physical Data Often Used

Average Earth–Moon distance	3.84×10^8 m
Average Earth–Sun distance	1.496×10^{11} m
Average radius of the Earth	6.37×10^6 m
Density of air (20°C and 1 atm)	1.20 kg/m ³
Density of air (0°C and 1 atm)	1.29 kg/m ³
Density of water (20°C and 1 atm)	1.00×10^3 kg/m ³
Free-fall acceleration	9.80 m/s ²
Mass of the Earth	5.97×10^{24} kg
Mass of the Moon	7.35×10^{22} kg
Mass of the Sun	1.99×10^{30} kg
Standard atmospheric pressure	1.013×10^5 Pa

Note: These values are the ones used in the text.

Some Prefixes for Powers of Ten

Power	Prefix	Abbreviation	Power	Prefix	Abbreviation
10^{-24}	yocto	y	10^1	deka	da
10^{-21}	zepto	z	10^2	hecto	h
10^{-18}	atto	a	10^3	kilo	k
10^{-15}	femto	f	10^6	mega	M
10^{-12}	pico	p	10^9	giga	G
10^{-9}	nano	n	10^{12}	tera	T
10^{-6}	micro	μ	10^{15}	peta	P
10^{-3}	milli	m	10^{18}	exa	E
10^{-2}	centi	c	10^{21}	zetta	Z
10^{-1}	deci	d	10^{24}	yotta	Y

Physics

for Scientists and Engineers
with Modern Physics

NINTH
EDITION

Raymond A. Serway

Emeritus, James Madison University

John W. Jewett, Jr.

*Emeritus, California State Polytechnic
University, Pomona*

With contributions from Vahé Perroomian,
University of California at Los Angeles

About the Cover

The cover shows a view inside the new railway departures concourse opened in March 2012 at the Kings Cross Station in London. The wall of the older structure (completed in 1852) is visible at the left. The sweeping shell-like roof is claimed by the architect to be the largest single-span station structure in Europe. Many principles of physics are required to design and construct such an open semicircular roof with a radius of 74 meters and containing over 2 000 triangular panels. Other principles of physics are necessary to develop the lighting design, optimize the acoustics, and integrate the new structure with existing infrastructure, historic buildings, and railway platforms.



 **BROOKS/COLE**
CENGAGE Learning®

© Ashley Cooper/Corbis

**Physics for Scientists and Engineers with
Modern Physics, Ninth Edition**
Raymond A. Serway and John W. Jewett, Jr.

Publisher, Physical Sciences: Mary Finch

Publisher, Physics and Astronomy:
Charlie Hartford

Development Editor: Ed Dodd

Assistant Editor: Brandi Kirksey

Editorial Assistant: Brendan Killion

Media Editor: Rebecca Berardy Schwartz

Brand Manager: Nicole Hamm

Marketing Communications Manager: Linda Yip

Senior Marketing Development Manager:
Tom Ziolkowski

Content Project Manager: Alison Eigel Zade

Senior Art Director: Cate Barr

Manufacturing Planner: Sandee Milewski

Rights Acquisition Specialist:
Shalice Shah-Caldwell

Production Service: Lachina Publishing Services

Text and Cover Designer: Roy Neuhaus

Cover Image: The new Kings Cross railway
station, London, UK

Cover Image Credit: © Ashley Cooper/Corbis

Compositor: Lachina Publishing Services

2014, 2010, 2008 by Raymond A. Serway

NO RIGHTS RESERVED. Any part of this work may be reproduced, transmitted, stored, or used in any form or by any means graphic, electronic, or mechanical, including but not limited to photocopying, recording, scanning, digitizing, taping, Web distribution, information networks, or information storage and retrieval systems, without the prior written permission of the publisher.

Library of Congress Control Number: 2012947242

ISBN-13: 978-1-133-95405-7

ISBN-10: 1-133-95405-7

Brooks/Cole
20 Channel Center Street
Boston, MA 02210
USA

We dedicate this book to our wives,
Elizabeth and Lisa, and all our children and
grandchildren for their loving understanding
when we spent time on writing
instead of being with them.

Brief Contents

PART 1 Mechanics 1

- 1 Physics and Measurement 2
- 2 Motion in One Dimension 21
- 3 Vectors 59
- 4 Motion in Two Dimensions 78
- 5 The Laws of Motion 111
- 6 Circular Motion and Other Applications of Newton's Laws 150
- 7 Energy of a System 177
- 8 Conservation of Energy 211
- 9 Linear Momentum and Collisions 247
- 10 Rotation of a Rigid Object About a Fixed Axis 293
- 11 Angular Momentum 335
- 12 Static Equilibrium and Elasticity 363
- 13 Universal Gravitation 388
- 14 Fluid Mechanics 417

PART 2 Oscillations and Mechanical Waves 449

- 15 Oscillatory Motion 450
- 16 Wave Motion 483
- 17 Sound Waves 507
- 18 Superposition and Standing Waves 533

PART 3 Thermodynamics 567

- 19 Temperature 568
- 20 The First Law of Thermodynamics 590
- 21 The Kinetic Theory of Gases 626
- 22 Heat Engines, Entropy, and the Second Law of Thermodynamics 653

PART 4 Electricity and Magnetism 689

- 23 Electric Fields 690
- 24 Gauss's Law 725
- 25 Electric Potential 746
- 26 Capacitance and Dielectrics 777
- 27 Current and Resistance 808
- 28 Direct-Current Circuits 833
- 29 Magnetic Fields 868
- 30 Sources of the Magnetic Field 904
- 31 Faraday's Law 935
- 32 Inductance 970
- 33 Alternating-Current Circuits 998
- 34 Electromagnetic Waves 1030

PART 5 Light and Optics 1057

- 35 The Nature of Light and the Principles of Ray Optics 1058
- 36 Image Formation 1090
- 37 Wave Optics 1134
- 38 Diffraction Patterns and Polarization 1160

PART 6 Modern Physics 1191

- 39 Relativity 1192
- 40 Introduction to Quantum Physics 1233
- 41 Quantum Mechanics 1267
- 42 Atomic Physics 1296
- 43 Molecules and Solids 1340
- 44 Nuclear Structure 1380
- 45 Applications of Nuclear Physics 1418
- 46 Particle Physics and Cosmology 1447

Contents

About the Authors viii

Preface ix

To the Student xxx

PART 1 Mechanics 1

1 Physics and Measurement 2

- 1.1 Standards of Length, Mass, and Time 3
- 1.2 Matter and Model Building 6
- 1.3 Dimensional Analysis 7
- 1.4 Conversion of Units 9
- 1.5 Estimates and Order-of-Magnitude Calculations 10
- 1.6 Significant Figures 11

2 Motion in One Dimension 21

- 2.1 Position, Velocity, and Speed 22
- 2.2 Instantaneous Velocity and Speed 25
- 2.3 Analysis Model: Particle Under Constant Velocity 28
- 2.4 Acceleration 31
- 2.5 Motion Diagrams 35
- 2.6 Analysis Model: Particle Under Constant Acceleration 36
- 2.7 Freely Falling Objects 40
- 2.8 Kinematic Equations Derived from Calculus 43

3 Vectors 59

- 3.1 Coordinate Systems 59
- 3.2 Vector and Scalar Quantities 61
- 3.3 Some Properties of Vectors 62
- 3.4 Components of a Vector and Unit Vectors 65

4 Motion in Two Dimensions 78

- 4.1 The Position, Velocity, and Acceleration Vectors 78
- 4.2 Two-Dimensional Motion with Constant Acceleration 81
- 4.3 Projectile Motion 84
- 4.4 Analysis Model: Particle in Uniform Circular Motion 91
- 4.5 Tangential and Radial Acceleration 94
- 4.6 Relative Velocity and Relative Acceleration 96

5 The Laws of Motion 111

- 5.1 The Concept of Force 111
- 5.2 Newton's First Law and Inertial Frames 113
- 5.3 Mass 114
- 5.4 Newton's Second Law 115
- 5.5 The Gravitational Force and Weight 117
- 5.6 Newton's Third Law 118
- 5.7 Analysis Models Using Newton's Second Law 120
- 5.8 Forces of Friction 130

6 Circular Motion and Other Applications of Newton's Laws 150

- 6.1 Extending the Particle in Uniform Circular Motion Model 150
- 6.2 Nonuniform Circular Motion 156
- 6.3 Motion in Accelerated Frames 158
- 6.4 Motion in the Presence of Resistive Forces 161

7 Energy of a System 177

- 7.1 Systems and Environments 178
- 7.2 Work Done by a Constant Force 178
- 7.3 The Scalar Product of Two Vectors 181
- 7.4 Work Done by a Varying Force 183
- 7.5 Kinetic Energy and the Work–Kinetic Energy Theorem 188
- 7.6 Potential Energy of a System 191
- 7.7 Conservative and Nonconservative Forces 196
- 7.8 Relationship Between Conservative Forces and Potential Energy 198
- 7.9 Energy Diagrams and Equilibrium of a System 199

8 Conservation of Energy 211

- 8.1 Analysis Model: Nonisolated System (Energy) 212
- 8.2 Analysis Model: Isolated System (Energy) 215
- 8.3 Situations Involving Kinetic Friction 222
- 8.4 Changes in Mechanical Energy for Nonconservative Forces 227
- 8.5 Power 232

9 Linear Momentum and Collisions 247

- 9.1 Linear Momentum 247
- 9.2 Analysis Model: Isolated System (Momentum) 250
- 9.3 Analysis Model: Nonisolated System (Momentum) 252
- 9.4 Collisions in One Dimension 256
- 9.5 Collisions in Two Dimensions 264
- 9.6 The Center of Mass 267
- 9.7 Systems of Many Particles 272
- 9.8 Deformable Systems 275
- 9.9 Rocket Propulsion 277

10 Rotation of a Rigid Object About a Fixed Axis 293

- 10.1 Angular Position, Velocity, and Acceleration 293
- 10.2 Analysis Model: Rigid Object Under Constant Angular Acceleration 296
- 10.3 Angular and Translational Quantities 298
- 10.4 Torque 300
- 10.5 Analysis Model: Rigid Object Under a Net Torque 302
- 10.6 Calculation of Moments of Inertia 307
- 10.7 Rotational Kinetic Energy 311
- 10.8 Energy Considerations in Rotational Motion 312
- 10.9 Rolling Motion of a Rigid Object 316

11 Angular Momentum 335

- 11.1 The Vector Product and Torque 335
- 11.2 Analysis Model: Nonisolated System (Angular Momentum) 338

- 11.3 Angular Momentum of a Rotating Rigid Object 342
- 11.4 Analysis Model: Isolated System (Angular Momentum) 345
- 11.5 The Motion of Gyroscopes and Tops 350

12 Static Equilibrium and Elasticity 363

- 12.1 Analysis Model: Rigid Object in Equilibrium 363
- 12.2 More on the Center of Gravity 365
- 12.3 Examples of Rigid Objects in Static Equilibrium 366
- 12.4 Elastic Properties of Solids 373

13 Universal Gravitation 388

- 13.1 Newton's Law of Universal Gravitation 389
- 13.2 Free-Fall Acceleration and the Gravitational Force 391
- 13.3 Analysis Model: Particle in a Field (Gravitational) 392
- 13.4 Kepler's Laws and the Motion of Planets 394
- 13.5 Gravitational Potential Energy 400
- 13.6 Energy Considerations in Planetary and Satellite Motion 402

14 Fluid Mechanics 417

- 14.1 Pressure 417
- 14.2 Variation of Pressure with Depth 419
- 14.3 Pressure Measurements 423
- 14.4 Buoyant Forces and Archimedes's Principle 423
- 14.5 Fluid Dynamics 427
- 14.6 Bernoulli's Equation 430
- 14.7 Other Applications of Fluid Dynamics 433

PART 2

Oscillations and Mechanical Waves 449

15 Oscillatory Motion 450

- 15.1 Motion of an Object Attached to a Spring 450
- 15.2 Analysis Model: Particle in Simple Harmonic Motion 452
- 15.3 Energy of the Simple Harmonic Oscillator 458
- 15.4 Comparing Simple Harmonic Motion with Uniform Circular Motion 462
- 15.5 The Pendulum 464
- 15.6 Damped Oscillations 468
- 15.7 Forced Oscillations 469

16 Wave Motion 483

- 16.1 Propagation of a Disturbance 484
- 16.2 Analysis Model: Traveling Wave 487
- 16.3 The Speed of Waves on Strings 491
- 16.4 Reflection and Transmission 494
- 16.5 Rate of Energy Transfer by Sinusoidal Waves on Strings 495
- 16.6 The Linear Wave Equation 497

17 Sound Waves 507

- 17.1 Pressure Variations in Sound Waves 508
- 17.2 Speed of Sound Waves 510
- 17.3 Intensity of Periodic Sound Waves 512
- 17.4 The Doppler Effect 517

18 Superposition and Standing Waves 533

- 18.1 Analysis Model: Waves in Interference 534
- 18.2 Standing Waves 538
- 18.3 Analysis Model: Waves Under Boundary Conditions 541
- 18.4 Resonance 546
- 18.5 Standing Waves in Air Columns 546
- 18.6 Standing Waves in Rods and Membranes 550
- 18.7 Beats: Interference in Time 550
- 18.8 Nonsinusoidal Wave Patterns 553

PART 3

Thermodynamics 567

19 Temperature 568

- 19.1 Temperature and the Zeroth Law of Thermodynamics 568
- 19.2 Thermometers and the Celsius Temperature Scale 570
- 19.3 The Constant-Volume Gas Thermometer and the Absolute Temperature Scale 571
- 19.4 Thermal Expansion of Solids and Liquids 573
- 19.5 Macroscopic Description of an Ideal Gas 578

20 The First Law of Thermodynamics 590

- 20.1 Heat and Internal Energy 590
- 20.2 Specific Heat and Calorimetry 593
- 20.3 Latent Heat 597
- 20.4 Work and Heat in Thermodynamic Processes 601
- 20.5 The First Law of Thermodynamics 603
- 20.6 Some Applications of the First Law of Thermodynamics 604
- 20.7 Energy Transfer Mechanisms in Thermal Processes 608

21 The Kinetic Theory of Gases 626

- 21.1 Molecular Model of an Ideal Gas 627
- 21.2 Molar Specific Heat of an Ideal Gas 631
- 21.3 The Equipartition of Energy 635
- 21.4 Adiabatic Processes for an Ideal Gas 637
- 21.5 Distribution of Molecular Speeds 639

22 Heat Engines, Entropy, and the Second Law of Thermodynamics 653

- 22.1 Heat Engines and the Second Law of Thermodynamics 654
- 22.2 Heat Pumps and Refrigerators 656
- 22.3 Reversible and Irreversible Processes 659
- 22.4 The Carnot Engine 660
- 22.5 Gasoline and Diesel Engines 665
- 22.6 Entropy 667
- 22.7 Changes in Entropy for Thermodynamic Systems 671
- 22.8 Entropy and the Second Law 676

PART 4

Electricity and Magnetism 689

23 Electric Fields 690

- 23.1 Properties of Electric Charges 690
- 23.2 Charging Objects by Induction 692
- 23.3 Coulomb's Law 694
- 23.4 Analysis Model: Particle in a Field (Electric) 699
- 23.5 Electric Field of a Continuous Charge Distribution 704
- 23.6 Electric Field Lines 708
- 23.7 Motion of a Charged Particle in a Uniform Electric Field 710

24 Gauss's Law 725

- 24.1 Electric Flux 725
- 24.2 Gauss's Law 728
- 24.3 Application of Gauss's Law to Various Charge Distributions 731
- 24.4 Conductors in Electrostatic Equilibrium 735

25 Electric Potential 746

- 25.1 Electric Potential and Potential Difference 746
- 25.2 Potential Difference in a Uniform Electric Field 748

- 25.3 Electric Potential and Potential Energy Due to Point Charges 752
- 25.4 Obtaining the Value of the Electric Field from the Electric Potential 755
- 25.5 Electric Potential Due to Continuous Charge Distributions 756
- 25.6 Electric Potential Due to a Charged Conductor 761
- 25.7 The Millikan Oil-Drop Experiment 764
- 25.8 Applications of Electrostatics 765

26 Capacitance and Dielectrics 777

- 26.1 Definition of Capacitance 777
- 26.2 Calculating Capacitance 779
- 26.3 Combinations of Capacitors 782
- 26.4 Energy Stored in a Charged Capacitor 786
- 26.5 Capacitors with Dielectrics 790
- 26.6 Electric Dipole in an Electric Field 793
- 26.7 An Atomic Description of Dielectrics 795

27 Current and Resistance 808

- 27.1 Electric Current 808
- 27.2 Resistance 811
- 27.3 A Model for Electrical Conduction 816
- 27.4 Resistance and Temperature 819
- 27.5 Superconductors 819
- 27.6 Electrical Power 820

28 Direct-Current Circuits 833

- 28.1 Electromotive Force 833
- 28.2 Resistors in Series and Parallel 836
- 28.3 Kirchhoff's Rules 843
- 28.4 RC Circuits 846
- 28.5 Household Wiring and Electrical Safety 852

29 Magnetic Fields 868

- 29.1 Analysis Model: Particle in a Field (Magnetic) 869
- 29.2 Motion of a Charged Particle in a Uniform Magnetic Field 874
- 29.3 Applications Involving Charged Particles Moving in a Magnetic Field 879
- 29.4 Magnetic Force Acting on a Current-Carrying Conductor 882
- 29.5 Torque on a Current Loop in a Uniform Magnetic Field 885
- 29.6 The Hall Effect 890

30 Sources of the Magnetic Field 904

- 30.1 The Biot-Savart Law 904
- 30.2 The Magnetic Force Between Two Parallel Conductors 909
- 30.3 Ampère's Law 911
- 30.4 The Magnetic Field of a Solenoid 915
- 30.5 Gauss's Law in Magnetism 916
- 30.6 Magnetism in Matter 919

31 Faraday's Law 935

- 31.1 Faraday's Law of Induction 935
- 31.2 Motional emf 939
- 31.3 Lenz's Law 944
- 31.4 Induced emf and Electric Fields 947
- 31.5 Generators and Motors 949
- 31.6 Eddy Currents 953

32 Inductance 970

- 32.1 Self-Induction and Inductance 970
- 32.2 RL Circuits 972
- 32.3 Energy in a Magnetic Field 976
- 32.4 Mutual Inductance 978
- 32.5 Oscillations in an LC Circuit 980
- 32.6 The RLC Circuit 984

33 Alternating-Current Circuits 998

- 33.1 AC Sources 998
- 33.2 Resistors in an AC Circuit 999
- 33.3 Inductors in an AC Circuit 1002
- 33.4 Capacitors in an AC Circuit 1004
- 33.5 The RLC Series Circuit 1007
- 33.6 Power in an AC Circuit 1011
- 33.7 Resonance in a Series RLC Circuit 1013
- 33.8 The Transformer and Power Transmission 1015
- 33.9 Rectifiers and Filters 1018

34 Electromagnetic Waves 1030

- 34.1 Displacement Current and the General Form of Ampère's Law 1031
- 34.2 Maxwell's Equations and Hertz's Discoveries 1033
- 34.3 Plane Electromagnetic Waves 1035
- 34.4 Energy Carried by Electromagnetic Waves 1039
- 34.5 Momentum and Radiation Pressure 1042
- 34.6 Production of Electromagnetic Waves by an Antenna 1044
- 34.7 The Spectrum of Electromagnetic Waves 1045

PART 5

Light and Optics 1057

35 The Nature of Light and the Principles of Ray Optics 1058

- 35.1 The Nature of Light 1058
- 35.2 Measurements of the Speed of Light 1059
- 35.3 The Ray Approximation in Ray Optics 1061
- 35.4 Analysis Model: Wave Under Reflection 1061
- 35.5 Analysis Model: Wave Under Refraction 1065
- 35.6 Huygens's Principle 1071
- 35.7 Dispersion 1072
- 35.8 Total Internal Reflection 1074

36 Image Formation 1090

- 36.1 Images Formed by Flat Mirrors 1090
- 36.2 Images Formed by Spherical Mirrors 1093
- 36.3 Images Formed by Refraction 1100
- 36.4 Images Formed by Thin Lenses 1104
- 36.5 Lens Aberrations 1112
- 36.6 The Camera 1113
- 36.7 The Eye 1115
- 36.8 The Simple Magnifier 1118
- 36.9 The Compound Microscope 1119
- 36.10 The Telescope 1120

37 Wave Optics 1134

- 37.1 Young's Double-Slit Experiment 1134
- 37.2 Analysis Model: Waves in Interference 1137
- 37.3 Intensity Distribution of the Double-Slit Interference Pattern 1140
- 37.4 Change of Phase Due to Reflection 1143
- 37.5 Interference in Thin Films 1144
- 37.6 The Michelson Interferometer 1147

38 Diffraction Patterns and Polarization 1160

- 38.1 Introduction to Diffraction Patterns 1160
- 38.2 Diffraction Patterns from Narrow Slits 1161
- 38.3 Resolution of Single-Slit and Circular Apertures 1166
- 38.4 The Diffraction Grating 1169
- 38.5 Diffraction of X-Rays by Crystals 1174
- 38.6 Polarization of Light Waves 1175

PART 6

Modern Physics 1191

39 Relativity 1192

- 39.1 The Principle of Galilean Relativity 1193
- 39.2 The Michelson–Morley Experiment 1196
- 39.3 Einstein's Principle of Relativity 1198
- 39.4 Consequences of the Special Theory of Relativity 1199
- 39.5 The Lorentz Transformation Equations 1210
- 39.6 The Lorentz Velocity Transformation Equations 1212
- 39.7 Relativistic Linear Momentum 1214
- 39.8 Relativistic Energy 1216
- 39.9 The General Theory of Relativity 1220

40 Introduction to Quantum Physics 1233

- 40.1 Blackbody Radiation and Planck's Hypothesis 1234
- 40.2 The Photoelectric Effect 1240
- 40.3 The Compton Effect 1246
- 40.4 The Nature of Electromagnetic Waves 1249
- 40.5 The Wave Properties of Particles 1249
- 40.6 A New Model: The Quantum Particle 1252
- 40.7 The Double-Slit Experiment Revisited 1255
- 40.8 The Uncertainty Principle 1256

41 Quantum Mechanics 1267

- 41.1 The Wave Function 1267
- 41.2 Analysis Model: Quantum Particle Under Boundary Conditions 1271
- 41.3 The Schrödinger Equation 1277
- 41.4 A Particle in a Well of Finite Height 1279
- 41.5 Tunneling Through a Potential Energy Barrier 1281
- 41.6 Applications of Tunneling 1282
- 41.7 The Simple Harmonic Oscillator 1286

42 Atomic Physics 1296

- 42.1 Atomic Spectra of Gases 1297
- 42.2 Early Models of the Atom 1299
- 42.3 Bohr's Model of the Hydrogen Atom 1300
- 42.4 The Quantum Model of the Hydrogen Atom 1306
- 42.5 The Wave Functions for Hydrogen 1308
- 42.6 Physical Interpretation of the Quantum Numbers 1311
- 42.7 The Exclusion Principle and the Periodic Table 1318
- 42.8 More on Atomic Spectra: Visible and X-Ray 1322
- 42.9 Spontaneous and Stimulated Transitions 1325
- 42.10 Lasers 1326

43 Molecules and Solids 1340

- 43.1 Molecular Bonds 1341
- 43.2 Energy States and Spectra of Molecules 1344
- 43.3 Bonding in Solids 1352
- 43.4 Free-Electron Theory of Metals 1355
- 43.5 Band Theory of Solids 1359
- 43.6 Electrical Conduction in Metals, Insulators, and Semiconductors 1361
- 43.7 Semiconductor Devices 1364
- 43.8 Superconductivity 1370

44 Nuclear Structure 1380

- 44.1 Some Properties of Nuclei 1381
- 44.2 Nuclear Binding Energy 1386
- 44.3 Nuclear Models 1387
- 44.4 Radioactivity 1390

- 44.5 The Decay Processes 1394
- 44.6 Natural Radioactivity 1404
- 44.7 Nuclear Reactions 1405
- 44.8 Nuclear Magnetic Resonance and Magnetic Resonance Imaging 1406

45 Applications of Nuclear Physics 1418

- 45.1 Interactions Involving Neutrons 1418
- 45.2 Nuclear Fission 1419
- 45.3 Nuclear Reactors 1421
- 45.4 Nuclear Fusion 1425
- 45.5 Radiation Damage 1432
- 45.6 Uses of Radiation 1434

46 Particle Physics and Cosmology 1447

- 46.1 The Fundamental Forces in Nature 1448
- 46.2 Positrons and Other Antiparticles 1449
- 46.3 Mesons and the Beginning of Particle Physics 1451
- 46.4 Classification of Particles 1454
- 46.5 Conservation Laws 1455
- 46.6 Strange Particles and Strangeness 1459
- 46.7 Finding Patterns in the Particles 1460
- 46.8 Quarks 1462
- 46.9 Multicolored Quarks 1465
- 46.10 The Standard Model 1467
- 46.11 The Cosmic Connection 1469
- 46.12 Problems and Perspectives 1474

Appendices

A Tables A-1

- A.1 Conversion Factors A-1
- A.2 Symbols, Dimensions, and Units of Physical Quantities A-2

B Mathematics Review A-4

- B.1 Scientific Notation A-4
- B.2 Algebra A-5
- B.3 Geometry A-10
- B.4 Trigonometry A-11
- B.5 Series Expansions A-13
- B.6 Differential Calculus A-13
- B.7 Integral Calculus A-16
- B.8 Propagation of Uncertainty A-20

C Periodic Table of the Elements A-22

D SI Units A-24

- D.1 SI Units A-24
- D.2 Some Derived SI Units A-24

Answers to Quick Quizzes and Odd-Numbered Problems A-25

Index I-1

About the Authors



Raymond A. Serway received his doctorate at Illinois Institute of Technology and is Professor Emeritus at James Madison University. In 2011, he was awarded with an honorary doctorate degree from his alma mater, Utica College. He received the 1990 Madison Scholar Award at James Madison University, where he taught for 17 years. Dr. Serway began his teaching career at Clarkson University, where he conducted research and taught from 1967 to 1980. He was the recipient of the Distinguished Teaching Award at Clarkson University in 1977 and the Alumni Achievement Award from Utica College in 1985. As Guest Scientist at the IBM Research Laboratory in Zurich, Switzerland, he worked with K. Alex Müller, 1987 Nobel Prize recipient. Dr. Serway also was a visiting scientist at Argonne National Laboratory, where he collaborated with his mentor and friend, the late Dr. Sam Marshall. Dr. Serway is the coauthor of *College Physics*, Ninth Edition; *Principles of Physics*, Fifth Edition; *Essentials of College Physics*; *Modern Physics*, Third Edition; and the high school textbook *Physics*,

published by Holt McDougal. In addition, Dr. Serway has published more than 40 research papers in the field of condensed matter physics and has given more than 60 presentations at professional meetings. Dr. Serway and his wife, Elizabeth, enjoy traveling, playing golf, fishing, gardening, singing in the church choir, and especially spending quality time with their four children, ten grandchildren, and a recent great grandson.



John W. Jewett, Jr. earned his undergraduate degree in physics at Drexel University and his doctorate at Ohio State University, specializing in optical and magnetic properties of condensed matter. Dr. Jewett began his academic career at Richard Stockton College of New Jersey, where he taught from 1974 to 1984. He is currently Emeritus Professor of Physics at California State Polytechnic University, Pomona. Through his teaching career, Dr. Jewett has been active in promoting effective physics education. In addition to receiving four National Science Foundation grants in physics education, he helped found and direct the Southern California Area Modern Physics Institute (SCAMPI) and Science IMPACT (Institute for Modern Pedagogy and Creative Teaching). Dr. Jewett's honors include the Stockton Merit Award at Richard Stockton College in 1980, selection as Outstanding Professor at California State Polytechnic University for 1991–1992, and the Excellence in Undergraduate Physics Teaching Award from the American Association of Physics Teachers

(AAPT) in 1998. In 2010, he received an Alumni Lifetime Achievement Award from Drexel University in recognition of his contributions in physics education. He has given more than 100 presentations both domestically and abroad, including multiple presentations at national meetings of the AAPT. He has also published 25 research papers in condensed matter physics and physics education research. Dr. Jewett is the author of *The World of Physics: Mysteries, Magic, and Myth*, which provides many connections between physics and everyday experiences. In addition to his work as the coauthor for *Physics for Scientists and Engineers*, he is also the coauthor on *Principles of Physics*, Fifth Edition, as well as *Global Issues*, a four-volume set of instruction manuals in integrated science for high school. Dr. Jewett enjoys playing keyboard with his all-physicist band, traveling, underwater photography, learning foreign languages, and collecting antique quack medical devices that can be used as demonstration apparatus in physics lectures. Most importantly, he relishes spending time with his wife, Lisa, and their children and grandchildren.

Preface

In writing this Ninth Edition of *Physics for Scientists and Engineers*, we continue our ongoing efforts to improve the clarity of presentation and include new pedagogical features that help support the learning and teaching processes. Drawing on positive feedback from users of the Eighth Edition, data gathered from both professors and students who use Enhanced WebAssign, as well as reviewers' suggestions, we have refined the text to better meet the needs of students and teachers.

This textbook is intended for a course in introductory physics for students majoring in science or engineering. The entire contents of the book in its extended version could be covered in a three-semester course, but it is possible to use the material in shorter sequences with the omission of selected chapters and sections. The mathematical background of the student taking this course should ideally include one semester of calculus. If that is not possible, the student should be enrolled in a concurrent course in introductory calculus.

Content

The material in this book covers fundamental topics in classical physics and provides an introduction to modern physics. The book is divided into six parts. Part 1 (Chapters 1 to 14) deals with the fundamentals of Newtonian mechanics and the physics of fluids; Part 2 (Chapters 15 to 18) covers oscillations, mechanical waves, and sound; Part 3 (Chapters 19 to 22) addresses heat and thermodynamics; Part 4 (Chapters 23 to 34) treats electricity and magnetism; Part 5 (Chapters 35 to 38) covers light and optics; and Part 6 (Chapters 39 to 46) deals with relativity and modern physics.

Objectives

This introductory physics textbook has three main objectives: to provide the student with a clear and logical presentation of the basic concepts and principles of physics, to strengthen an understanding of the concepts and principles through a broad range of interesting real-world applications, and to develop strong problem-solving skills through an effectively organized approach. To meet these objectives, we emphasize well-organized physical arguments and a focused problem-solving strategy. At the same time, we attempt to motivate the student through practical examples that demonstrate the role of physics in other disciplines, including engineering, chemistry, and medicine.

Changes in the Ninth Edition

A large number of changes and improvements were made for the Ninth Edition of this text. Some of the new features are based on our experiences and on current trends in science education. Other changes were incorporated in response to comments and suggestions offered by users of the Eighth Edition and by reviewers of the manuscript. The features listed here represent the major changes in the Ninth Edition.

Enhanced Integration of the Analysis Model Approach to Problem Solving. Students are faced with hundreds of problems during their physics courses. A relatively small number of fundamental principles form the basis of these problems. When faced with a new problem, a physicist forms a *model* of the problem that can be solved in a simple way by identifying the fundamental principle that is applicable in the problem. For example, many problems involve conservation of energy, Newton's second law, or kinematic equations. Because the physicist has studied these principles and their applications extensively, he or she can apply this knowledge as a model for solving a new problem. Although it would be ideal for students to follow this same process, most students have difficulty becoming familiar with the entire palette of fundamental principles that are available. It is easier for students to identify a *situation* rather than a fundamental principle.

The *Analysis Model approach* we focus on in this revision lays out a standard set of situations that appear in most physics problems. These situations are based on an entity in one of four simplification models: particle, system, rigid object, and wave. Once the simplification model is identified, the student thinks about what the entity is doing or how it interacts with its environment. This leads the student to identify a particular Analysis Model for the problem. For example, if an object is falling, the object is recognized as a particle experiencing an acceleration due to gravity that is constant. The student has learned that the Analysis Model of a *particle under constant acceleration* describes this situation. Furthermore, this model has a small number of equations associated with it for use in starting problems, the kinematic equations presented in Chapter 2. Therefore, an understanding of the situation has led to an Analysis Model, which then identifies a very small number of equations to start the problem, rather than the myriad equations that students see in the text. In this way, the use of Analysis Models leads the student to identify the fundamental principle. As the student gains more experience, he or she will lean less on the Analysis Model approach and begin to identify fundamental principles directly.

To better integrate the Analysis Model approach for this edition, **Analysis Model descriptive boxes** have been added at the end of any section that introduces a new Analysis Model. This feature recaps the Analysis Model introduced in the section and provides examples of the types of problems that a student could solve using the Analysis Model. These boxes function as a “refresher” before students see the Analysis Models in use in the worked examples for a given section.

Worked examples in the text that utilize Analysis Models are now designated with an **AM** icon for ease of reference. The solutions of these examples integrate the Analysis Model approach to problem solving. The approach is further reinforced in the end-of-chapter summary under the heading *Analysis Models for Problem Solving*, and through the new **Analysis Model Tutorials** that are based on selected end-of-chapter problems and appear in Enhanced WebAssign.

Analysis Model Tutorials. John Jewett developed 165 tutorials (indicated in each chapter’s problem set with an **AMT** icon) that strengthen students’ problem-solving skills by guiding them through the steps in the problem-solving process. Important first steps include making predictions and focusing on physics concepts before solving the problem quantitatively. A critical component of these tutorials is the selection of an appropriate Analysis Model to describe what is going on in the problem. This step allows students to make the important link between the situation in the problem and the mathematical representation of the situation. Analysis Model tutorials include meaningful feedback at each step to help students practice the problem-solving process and improve their skills. In addition, the feedback addresses student misconceptions and helps them to catch algebraic and other mathematical errors. Solutions are carried out symbolically as long as possible, with numerical values substituted at the end. This feature helps students understand the effects of changing the values of each variable in the problem, avoids unnecessary repetitive substitution of the same numbers, and eliminates round-off errors. Feedback at the end of the tutorial encourages students to compare the final answer with their original predictions.

Annotated Instructor’s Edition. New for this edition, the Annotated Instructor’s Edition provides instructors with teaching tips and other notes on how to utilize the textbook in the classroom, via cyan annotations. Additionally, the full complement of icons describing the various types of problems will be included in the questions/problems sets (the Student Edition contains only those icons needed by students).

PreLecture Explorations. The Active Figure questions in WebAssign from the Eighth Edition have been completely revised. The simulations have been updated, with additional parameters to enhance investigation of a physical phenomenon. Students can make predictions, change the parameters, and then observe the results. Each new PreLecture Exploration comes with conceptual and analytical questions that guide students to a deeper understanding and help promote a robust physical intuition.

New Master Its Added in Enhanced WebAssign. Approximately 50 new Master Its in Enhanced WebAssign have been added for this edition to the end-of-chapter problem sets.

Chapter-by-Chapter Changes

The list below highlights some of the major changes for the Ninth Edition.

Chapter 1

- Two new Master Its were added to the end-of-chapter problems set.
- Three new Analysis Model Tutorials were added for this chapter in Enhanced WebAssign.

Chapter 2

- A new introduction to the concept of Analysis Models has been included in Section 2.3.
- Three Analysis Model descriptive boxes have been added, in Sections 2.3 and 2.6.
- Several textual sections have been revised to make more explicit references to analysis models.
- Three new Master Its were added to the end-of-chapter problems set.
- Five new Analysis Model Tutorials were added for this chapter in Enhanced WebAssign.

Chapter 3

- Three new Analysis Model Tutorials were added for this chapter in Enhanced WebAssign.

Chapter 4

- An Analysis Model descriptive box has been added, in Section 4.6.
- Several textual sections have been revised to make more explicit references to analysis models.
- Three new Master Its were added to the end-of-chapter problems set.
- Five new Analysis Model Tutorials were added for this chapter in Enhanced WebAssign.

Chapter 5

- Two Analysis Model descriptive boxes have been added, in Section 5.7.
- Several examples have been modified so that numerical values are put in only at the end of the solution.
- Several textual sections have been revised to make more explicit references to analysis models.
- Four new Master Its were added to the end-of-chapter problems set.
- Four new Analysis Model Tutorials were added for this chapter in Enhanced WebAssign.

Chapter 6

- An Analysis Model descriptive box has been added, in Section 6.1.
- Several examples have been modified so that numerical values are put in only at the end of the solution.
- Four new Analysis Model Tutorials were added for this chapter in Enhanced WebAssign.

Chapter 7

- The notation for work done on a system externally and internally within a system has been clarified.
- The equations and discussions in several sections have been modified to more clearly show the comparisons of similar potential energy equations among different situations.

- One new Master It was added to the end-of-chapter problems set.
- Four new Analysis Model Tutorials were added for this chapter in Enhanced WebAssign.

Chapter 8

- Two Analysis Model descriptive boxes have been added, in Sections 8.1 and 8.2.
- The problem-solving strategy in Section 8.2 has been reworded to account for a more general application to both isolated and nonisolated systems.
- As a result of a suggestion from a PER team at University of Washington and Pennsylvania State University, Example 8.1 has been rewritten to demonstrate to students the effect of choosing different systems on the development of the solution.
- All examples in the chapter have been rewritten to begin with Equation 8.2 directly rather than beginning with the format $E_i = E_f$.
- Several examples have been modified so that numerical values are put in only at the end of the solution.
- The problem-solving strategy in Section 8.4 has been deleted and the text material revised to incorporate these ideas on handling energy changes when nonconservative forces act.
- Several textual sections have been revised to make more explicit references to analysis models.
- One new Master It was added to the end-of-chapter problems set.
- Four new Analysis Model Tutorials were added for this chapter in Enhanced WebAssign.

Chapter 9

- Two Analysis Model descriptive boxes have been added, in Section 9.3.
- Several examples have been modified so that numerical values are put in only at the end of the solution.
- Five new Master Its were added to the end-of-chapter problems set.
- Four new Analysis Model Tutorials were added for this chapter in Enhanced WebAssign.

Chapter 10

- The order of four sections (10.4–10.7) has been modified so as to introduce moment of inertia through torque (rather than energy) and to place the two sections on energy together. The sections have been revised accordingly to account for the revised development of concepts. This revision makes the order of approach similar to the order of approach students have already seen in translational motion.
- New introductory paragraphs have been added to several sections to show how the development of our analysis of rotational motion parallels that followed earlier for translational motion.
- Two Analysis Model descriptive boxes have been added, in Sections 10.2 and 10.5.
- Several textual sections have been revised to make more explicit references to analysis models.

- Two new Master Its were added to the end-of-chapter problems set.
- Four new Analysis Model Tutorials were added for this chapter in Enhanced WebAssign.

Chapter 11

- Two Analysis Model descriptive boxes have been added, in Sections 11.2 and 11.4.
- Angular momentum conservation equations have been revised so as to be presented as $\Delta L = (0 \text{ or } \tau dt)$ in order to be consistent with the approach in Chapter 8 for energy conservation and Chapter 9 for linear momentum conservation.
- Four new Analysis Model Tutorials were added for this chapter in Enhanced WebAssign.

Chapter 12

- One Analysis Model descriptive box has been added, in Section 12.1.
- Several examples have been modified so that numerical values are put in only at the end of the solution.
- Four new Analysis Model Tutorials were added for this chapter in Enhanced WebAssign.

Chapter 13

- Sections 13.3 and 13.4 have been interchanged to provide a better flow of concepts.
- A new analysis model has been introduced: *Particle in a Field (Gravitational)*. This model is introduced because it represents a physical situation that occurs often. In addition, the model is introduced to anticipate the importance of versions of this model later in electricity and magnetism, where it is even more critical. An Analysis Model descriptive box has been added in Section 13.3. In addition, a new summary flash card has been added at the end of the chapter, and textual material has been revised to make reference to the new model.
- The description of the historical goals of the Cavendish experiment in 1798 has been revised to be more consistent with Cavendish's original intent and the knowledge available at the time of the experiment.
- Newly discovered Kuiper belt objects have been added, in Section 13.4.
- Textual material has been modified to make a stronger tie-in to Analysis Models, especially in the energy sections 13.5 and 13.6.
- All conservation equations have been revised so as to be presented with the change in the system on the left and the transfer across the boundary of the system on the right, in order to be consistent with the approach in earlier chapters for energy conservation, linear momentum conservation, and angular momentum conservation.
- Four new Analysis Model Tutorials were added for this chapter in Enhanced WebAssign.

Chapter 14

- Several textual sections have been revised to make more explicit references to Analysis Models.
- Several examples have been modified so that numerical values are put in only at the end of the solution.

- One new Master It was added to the end-of-chapter problems set.
- Four new Analysis Model Tutorials were added for this chapter in Enhanced WebAssign.

Chapter 15

- An Analysis Model descriptive box has been added, in Section 15.2.
- Several textual sections have been revised to make more explicit references to Analysis Models.
- Four new Master Its were added to the end-of-chapter problems set.
- Four new Analysis Model Tutorials were added for this chapter in Enhanced WebAssign.

Chapter 16

- A new Analysis Model descriptive box has been added, in Section 16.2.
- Section 16.3, on the derivation of the speed of a wave on a string, has been completely rewritten to improve the logical development.
- Four new Analysis Model Tutorials were added for this chapter in Enhanced WebAssign.

Chapter 17

- One new Master It was added to the end-of-chapter problems set.
- Four new Analysis Model Tutorials were added for this chapter in Enhanced WebAssign.

Chapter 18

- Two Analysis Model descriptive boxes have been added, in Sections 18.1 and 18.3.
- Two new Master Its were added to the end-of-chapter problems set.
- Four new Analysis Model Tutorials were added for this chapter in Enhanced WebAssign.

Chapter 19

- Several examples have been modified so that numerical values are put in only at the end of the solution.
- One new Master It was added to the end-of-chapter problems set.
- Four new Analysis Model Tutorials were added for this chapter in Enhanced WebAssign.

Chapter 20

- Section 20.3 was revised to emphasize the focus on *systems*.
- Five new Master Its were added to the end-of-chapter problems set.
- Four new Analysis Model Tutorials were added for this chapter in Enhanced WebAssign.

Chapter 21

- A new introduction to Section 21.1 sets up the notion of *structural models* to be used in this chapter and future chapters for describing systems that are too large or too small to observe directly.
- Fifteen new equations have been numbered, and all equations in the chapter have been renumbered. This

new program of equation numbers allows easier and more efficient referencing to equations in the development of kinetic theory.

- The order of Sections 21.3 and 21.4 has been reversed to provide a more continuous discussion of specific heats of gases.
- One new Master It was added to the end-of-chapter problems set.
- Four new Analysis Model Tutorials were added for this chapter in Enhanced WebAssign.

Chapter 22

- In Section 22.4, the discussion of Carnot's theorem has been rewritten and expanded, with a new figure added that is connected to the proof of the theorem.
- The material in Sections 22.6, 22.7, and 22.8 has been completely reorganized, reordered, and rewritten. The notion of entropy as a measure of disorder has been removed in favor of more contemporary ideas from the physics education literature on entropy and its relationship to notions such as uncertainty, missing information, and energy spreading.
- Two new Pitfall Preventions have been added in Section 22.6 to help students with their understanding of entropy.
- There is a newly added argument for the equivalence of the entropy statement of the second law and the Clausius and Kelvin–Planck statements in Section 22.8.
- Two new summary flashcards have been added relating to the revised entropy discussion.
- Three new Master Its were added to the end-of-chapter problems set.
- Four new Analysis Model Tutorials were added for this chapter in Enhanced WebAssign.

Chapter 23

- A new analysis model has been introduced: *Particle in a Field (Electrical)*. This model follows on the introduction of the Particle in a Field (Gravitational) model introduced in Chapter 13. An Analysis Model descriptive box has been added, in Section 23.4. In addition, a new summary flash card has been added at the end of the chapter, and textual material has been revised to make reference to the new model.
- A new What If? has been added to Example 23.9 in order to make a connection to infinite planes of charge, to be further studied in later chapters.
- Several textual sections and worked examples have been revised to make more explicit references to analysis models.
- One new Master It was added to the end-of-chapter problems set.
- Four new Analysis Model Tutorials were added for this chapter in Enhanced WebAssign.

Chapter 24

- Section 24.1 has been significantly revised to clarify the geometry of area elements through which electric field lines pass to generate an electric flux.
- Two new figures have been added to Example 24.5 to further explore the electric fields due to single and paired infinite planes of charge.

- Two new Master Its were added to the end-of-chapter problems set.
- Four new Analysis Model Tutorials were added for this chapter in Enhanced WebAssign.

Chapter 25

- Sections 25.1 and 25.2 have been significantly revised to make connections to the new particle in a field analysis models introduced in Chapters 13 and 23.
- Example 25.4 has been moved so as to appear after the Problem-Solving Strategy in Section 25.5, allowing students to compare electric fields due to a small number of charges and a continuous charge distribution.
- Two new Master Its were added to the end-of-chapter problems set.
- Four new Analysis Model Tutorials were added for this chapter in Enhanced WebAssign.

Chapter 26

- The discussion of series and parallel capacitors in Section 26.3 has been revised for clarity.
- The discussion of potential energy associated with an electric dipole in an electric field in Section 26.6 has been revised for clarity.
- Four new Analysis Model Tutorials were added for this chapter in Enhanced WebAssign.

Chapter 27

- The discussion of the Drude model for electrical conduction in Section 27.3 has been revised to follow the outline of structural models introduced in Chapter 21.
- Several textual sections have been revised to make more explicit references to analysis models.
- Five new Master Its were added to the end-of-chapter problems set.
- Four new Analysis Model Tutorials were added for this chapter in Enhanced WebAssign.

Chapter 28

- The discussion of series and parallel resistors in Section 28.2 has been revised for clarity.
- Time-varying charge, current, and voltage have been represented with lowercase letters for clarity in distinguishing them from constant values.
- Five new Master Its were added to the end-of-chapter problems set.
- Two new Analysis Model Tutorials were added for this chapter in Enhanced WebAssign.

Chapter 29

- A new analysis model has been introduced: *Particle in a Field (Magnetic)*. This model follows on the introduction of the Particle in a Field (Gravitational) model introduced in Chapter 13 and the Particle in a Field (Electrical) model in Chapter 23. An Analysis Model descriptive box has been added, in Section 29.1. In addition, a new summary flash card has been added at the end of the chapter, and textual material has been revised to make reference to the new model.

- One new Master It was added to the end-of-chapter problems set.
- Six new Analysis Model Tutorials were added for this chapter in Enhanced WebAssign.

Chapter 30

- Several textual sections have been revised to make more explicit references to analysis models.
- One new Master It was added to the end-of-chapter problems set.
- Four new Analysis Model Tutorials were added for this chapter in Enhanced WebAssign.

Chapter 31

- Several textual sections have been revised to make more explicit references to analysis models.
- One new Master It was added to the end-of-chapter problems set.
- Four new Analysis Model Tutorials were added for this chapter in Enhanced WebAssign.

Chapter 32

- Several textual sections have been revised to make more explicit references to analysis models.
- Time-varying charge, current, and voltage have been represented with lowercase letters for clarity in distinguishing them from constant values.
- Two new Master Its were added to the end-of-chapter problems set.
- Three new Analysis Model Tutorials were added for this chapter in Enhanced WebAssign.

Chapter 33

- Phasor colors have been revised in many figures to improve clarity of presentation.
- Three new Analysis Model Tutorials were added for this chapter in Enhanced WebAssign.

Chapter 34

- Several textual sections have been revised to make more explicit references to analysis models.
- The status of spacecraft related to solar sailing has been updated in Section 34.5.
- Six new Analysis Model Tutorials were added for this chapter in Enhanced WebAssign.

Chapter 35

- Two new Analysis Model descriptive boxes have been added, in Sections 35.4 and 35.5.
- Several textual sections and worked examples have been revised to make more explicit references to analysis models.
- Five new Master Its were added to the end-of-chapter problems set.
- Four new Analysis Model Tutorials were added for this chapter in Enhanced WebAssign.

Chapter 36

- The discussion of the Keck Telescope in Section 36.10 has been updated, and a new figure from the Keck has

been included, representing the first-ever direct optical image of a solar system beyond ours.

- Five new Master Its were added to the end-of-chapter problems set.
- Three new Analysis Model Tutorials were added for this chapter in Enhanced WebAssign.

Chapter 37

- An Analysis Model descriptive box has been added, in Section 37.2.
- The discussion of the Laser Interferometer Gravitational-Wave Observatory (LIGO) in Section 37.6 has been updated.
- Three new Master Its were added to the end-of-chapter problems set.
- Four new Analysis Model Tutorials were added for this chapter in Enhanced WebAssign.

Chapter 38

- Four new Master Its were added to the end-of-chapter problems set.
- Three new Analysis Model Tutorials were added for this chapter in Enhanced WebAssign.

Chapter 39

- Several textual sections have been revised to make more explicit references to analysis models.
- Sections 39.8 and 39.9 from the Eighth Edition have been combined into one section.
- Five new Master Its were added to the end-of-chapter problems set.
- Four new Analysis Model Tutorials were added for this chapter in Enhanced WebAssign.

Chapter 40

- The discussion of the Planck model for blackbody radiation in Section 40.1 has been revised to follow the outline of structural models introduced in Chapter 21.
- The discussion of the Einstein model for the photoelectric effect in Section 40.2 has been revised to follow the outline of structural models introduced in Chapter 21.
- Several textual sections have been revised to make more explicit references to analysis models.
- Two new Master Its were added to the end-of-chapter problems set.
- Two new Analysis Model Tutorials were added for this chapter in Enhanced WebAssign.

Chapter 41

- An Analysis Model descriptive box has been added, in Section 41.2.
- One new Analysis Model Tutorial was added for this chapter in Enhanced WebAssign.

Chapter 42

- The discussion of the Bohr model for the hydrogen atom in Section 42.3 has been revised to follow the outline of structural models introduced in Chapter 21.
- In Section 42.7, the tendency for atomic systems to drop to their lowest energy levels is related to the new discus-

sion of the second law of thermodynamics appearing in Chapter 22.

- The discussion of the applications of lasers in Section 42.10 has been updated to include laser diodes, carbon dioxide lasers, and excimer lasers.
- Several textual sections have been revised to make more explicit references to analysis models.
- Five new Master Its were added to the end-of-chapter problems set.
- Three new Analysis Model Tutorials were added for this chapter in Enhanced WebAssign.

Chapter 43

- A new discussion of the contribution of carbon dioxide molecules in the atmosphere to global warming has been added to Section 43.2. A new figure has been added, showing the increasing concentration of carbon dioxide in the past decades.
- A new discussion of graphene (Nobel Prize in Physics, 2010) and its properties has been added to Section 43.4.
- The discussion of worldwide photovoltaic power plants in Section 43.7 has been updated.
- The discussion of transistor density on microchips in Section 43.7 has been updated.
- Several textual sections and worked examples have been revised to make more explicit references to analysis models.
- One new Analysis Model Tutorial was added for this chapter in Enhanced WebAssign.

Chapter 44

- Data for the helium-4 atom were added to Table 44.1.
- Several textual sections have been revised to make more explicit references to analysis models.
- Three new Master Its were added to the end-of-chapter problems set.
- Two new Analysis Model Tutorials were added for this chapter in Enhanced WebAssign.

Chapter 45

- Discussion of the March 2011 nuclear disaster after the earthquake and tsunami in Japan was added to Section 45.3.
- The discussion of the International Thermonuclear Experimental Reactor (ITER) in Section 45.4 has been updated.
- The discussion of the National Ignition Facility (NIF) in Section 45.4 has been updated.
- The discussion of radiation dosage in Section 45.5 has been cast in terms of SI units grays and sieverts.
- Section 45.6 from the Eighth Edition has been deleted.
- Four new Master Its were added to the end-of-chapter problems set.
- One new Analysis Model Tutorial was added for this chapter in Enhanced WebAssign.

Chapter 46

- A discussion of the ALICE (A Large Ion Collider Experiment) project searching for a quark–gluon plasma at the Large Hadron Collider (LHC) has been added to Section 46.9.
- A discussion of the July 2012 announcement of the discovery of a Higgs-like particle from the ATLAS (A Toroidal LHC Apparatus) and CMS (Compact Muon Solenoid) projects at the Large Hadron Collider (LHC) has been added to Section 46.10.
- A discussion of closures of colliders due to the beginning of operations at the Large Hadron Collider (LHC) has been added to Section 46.10.
- A discussion of recent missions and the new Planck mission to study the cosmic background radiation has been added to Section 46.11.
- Several textual sections have been revised to make more explicit references to analysis models.
- One new Master It was added to the end-of-chapter problems set.
- One new Analysis Model Tutorial was added for this chapter in Enhanced WebAssign.

Text Features

Most instructors believe that the textbook selected for a course should be the student's primary guide for understanding and learning the subject matter. Furthermore, the textbook should be easily accessible and should be styled and written to facilitate instruction and learning. With these points in mind, we have included many pedagogical features, listed below, that are intended to enhance its usefulness to both students and instructors.

Problem Solving and Conceptual Understanding

General Problem-Solving Strategy. A general strategy outlined at the end of Chapter 2 (pages 45–47) provides students with a structured process for solving problems. In all remaining chapters, the strategy is employed explicitly in every example so that students learn how it is applied. Students are encouraged to follow this strategy when working end-of-chapter problems.

Worked Examples. All in-text worked examples are presented in a two-column format to better reinforce physical concepts. The left column shows textual information

that describes the steps for solving the problem. The right column shows the mathematical manipulations and results of taking these steps. This layout facilitates matching the concept with its mathematical execution and helps students organize their work. The examples closely follow the General Problem-Solving Strategy introduced in Chapter 2 to reinforce effective problem-solving habits. All worked examples in the text may be assigned for homework in Enhanced WebAssign. A sample of a worked example can be found on the next page.

Examples consist of two types. The first (and most common) example type presents a problem and numerical answer. The second type of example is conceptual in nature. To accommodate increased emphasis on understanding physical concepts, the many conceptual examples are labeled as such and are designed to help students focus on the physical situation in the problem. Worked examples in the text that utilize Analysis Models are now designated with an **AM** icon for ease of reference, and the solutions of these examples now more thoroughly integrate the Analysis Model approach to problem solving.

Based on reviewer feedback from the Eighth Edition, we have made careful revisions to the worked examples so that the solutions are presented symbolically as far as possible, with numerical values substituted at the end. This approach will help students think symbolically when they solve problems instead of unnecessarily inserting numbers into intermediate equations.

What If? Approximately one-third of the worked examples in the text contain a What If? feature. At the completion of the example solution, a What If? question offers a variation on the situation posed in the text of the example. This feature encourages students to think about the results of the example, and it also assists in conceptual understanding of the principles. What If? questions also prepare students to encounter novel problems that may be included on exams. Some of the end-of-chapter problems also include this feature.

Quick Quizzes. Students are provided an opportunity to test their understanding of the physical concepts presented through Quick Quizzes. The questions require students to make decisions on the basis of sound reasoning, and some of the questions have been written to help students overcome common misconceptions. Quick Quizzes have been cast in an objective format, including multiple-choice, true–false, and ranking. Answers to all Quick Quiz questions are found at the end of the text. Many instructors choose to use such questions in a “peer instruction” teaching style or with the use of personal response system “clickers,” but they can be used in standard quiz format as well. An example of a Quick Quiz follows below.

- Quick Quiz 7.5** A dart is inserted into a spring-loaded dart gun by pushing the spring in by a distance x . For the next loading, the spring is compressed a distance $2x$. How much faster does the second dart leave the gun compared with the first? (a) four times as fast (b) two times as fast (c) the same (d) half as fast (e) one-fourth as fast

Pitfall Preventions. More than two hundred Pitfall Preventions (such as the one to the left) are provided to help students avoid common mistakes and misunderstandings. These features, which are placed in the margins of the text, address both common student misconceptions and situations in which students often follow unproductive paths.

Summaries. Each chapter contains a summary that reviews the important concepts and equations discussed in that chapter. The summary is divided into three sections: Definitions, Concepts and Principles, and Analysis Models for Problem Solving. In each section, flash card–type boxes focus on each separate definition, concept, principle, or analysis model.

Pitfall Prevention 16.2

Two Kinds of Speed/Velocity

Do not confuse v , the speed of the wave as it propagates along the string, with v_y , the transverse velocity of a point on the string. The speed v is constant for a uniform medium, whereas v_y varies sinusoidally.

ENHANCED WebAssign All worked examples are also available to be assigned as interactive examples in the Enhanced WebAssign homework management system.

Example 3.2 A Vacation Trip

A car travels 20.0 km due north and then 35.0 km in a direction 60.0° west of north as shown in Figure 3.11a. Find the magnitude and direction of the car's resultant displacement.

SOLUTION

Conceptualize The vectors and drawn in Figure 3.11a help us conceptualize the problem. The resultant vector has also been drawn. We expect its magnitude to be a few tens of kilometers. The angle that the resultant vector makes with the axis is expected to be less than 60°, the angle that vector makes with the axis.

Categorize We can categorize this example as a simple analysis problem in vector addition. The displacement is the resultant when the two individual displacements and are added. We can further categorize it as a problem about the analysis of triangles, so we appeal to our expertise in geometry and trigonometry.

Analyze In this example, we show two ways to analyze the problem of finding the resultant of two vectors. The first way is to solve the problem geometrically, using graph paper and a protractor to measure the magnitude of and its direction in Figure 3.11a. (In fact, even when you know you are going to be carrying out a calculation, you should sketch the vectors to check your results.) With an ordinary ruler and protractor, a large diagram typically gives answers to two-digit but not to three-digit precision. Try using these tools on in Figure 3.11a and compare to the trigonometric analysis below!

The second way to solve the problem is to analyze it using algebra and trigonometry. The magnitude of can be obtained from the law of cosines as applied to the triangle in Figure 3.11a (see Appendix B.4).

Use \cos from the law of cosines to find

Substitute numerical values, noting that $180^\circ - 60^\circ = 120^\circ$:

$$R = \sqrt{(20.0 \text{ km})^2 + (35.0 \text{ km})^2 - 2(20.0 \text{ km})(35.0 \text{ km}) \cos 120^\circ}$$

$$= 48.2 \text{ km}$$

Use the law of sines (Appendix B.4) to find the direction measured from the northerly direction:

$$\frac{\sin \beta}{35.0 \text{ km}} = \frac{\sin 120^\circ}{48.2 \text{ km}}$$

$$\sin \beta = \frac{35.0 \text{ km}}{48.2 \text{ km}} \sin 120^\circ = 0.629$$

$$\beta = 38.9^\circ$$

The resultant displacement of the car is 48.2 km in a direction 38.9° west of north.

Finalize Does the angle that we calculated agree with an estimate made by looking at Figure 3.11a or with an actual angle measured from the diagram using the graphical method? Is it reasonable that the magnitude of is larger than that of both and ? Are the units of correct?

Although the head to tail method of adding vectors works well, it suffers from two disadvantages. First, some

people find using the laws of cosines and sines to be awkward. Second, a triangle only results if you are adding two vectors. If you are adding three or more vectors, the resulting geometric shape is usually not a triangle. In Section 3.4, we explore a new method of adding vectors that will address both of these disadvantages.

WHAT Suppose the trip were taken with the two vectors in reverse order: 35.0 km at 60.0° west of north first and then 20.0 km due north. How would the magnitude and the direction of the resultant vector change?

Answer They would not change. The commutative law for vector addition tells us that the order of vectors in an addition is irrelevant. Graphically, Figure 3.11b shows that the vectors added in the reverse order give us the same resultant vector.

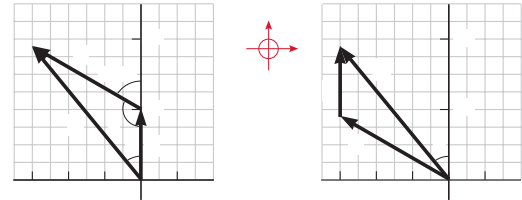


Figure 3.11 (Example 3.2) (a) Graphical method for finding the resultant displacement vector (b) Adding the vectors in reverse order gives the same result for

Each solution has been written to closely follow the General Problem-Solving Strategy as outlined on pages 45–47 in Chapter 2, so as to reinforce good problem-solving habits.

Each step of the solution is detailed in a two-column format. The left column provides an explanation for each mathematical step in the right column, to better reinforce the physical concepts.

What If? statements appear in about one-third of the worked examples and offer a variation on the situation posed in the text of the example. For instance, this feature might explore the effects of changing the conditions of the situation, determine what happens when a quantity is taken to a particular limiting value, or question whether additional information can be determined about the problem situation. This feature encourages students to think about the results of the example and assists in conceptual understanding of the principles.

Questions and Problems Sets. For the Ninth Edition, the authors reviewed each question and problem and incorporated revisions designed to improve both readability and assignability. More than 10% of the problems are new to this edition.

Questions. The Questions section is divided into two sections: *Objective Questions* and *Conceptual Questions*. The instructor may select items to assign as homework or use in the classroom, possibly with “peer instruction” methods and possibly with personal response systems. More than 900 Objective and Conceptual Questions are included in this edition. Answers for selected questions are included in the *Student Solutions Manual/Study Guide*, and answers for all questions are found in the *Instructor’s Solutions Manual*.

Objective Questions are multiple-choice, true–false, ranking, or other multiple guess–type questions. Some require calculations designed to facilitate students’ familiarity with the equations, the variables used, the concepts the variables represent, and the relationships between the concepts. Others are more conceptual in nature and are designed to encourage conceptual thinking. Objective Questions are also written with the personal response system user in mind, and most of the questions could easily be used in these systems.

Conceptual Questions are more traditional short-answer and essay-type questions that require students to think conceptually about a physical situation.

Problems. An extensive set of problems is included at the end of each chapter; in all, this edition contains more than 3 700 problems. Answers for odd-numbered problems are provided at the end of the book. Full solutions for approximately 20% of the problems are included in the *Student Solutions Manual/Study Guide*, and solutions for all problems are found in the *Instructor’s Solutions Manual*.

The end-of-chapter problems are organized by the sections in each chapter (about two-thirds of the problems are keyed to specific sections of the chapter). Within each section, the problems now “platform” students to higher-order thinking by presenting all the straightforward problems in the section first, followed by the intermediate problems. (The problem numbers for straightforward problems are printed in **black**; intermediate-level problems are in **blue**.) The *Additional Problems* section contains problems that are not keyed to specific sections. At the end of each chapter is the *Challenge Problems* section, which gathers the most difficult problems for a given chapter in one place. (Challenge Problems have problem numbers marked in **red**.)

There are several kinds of problems featured in this text:

Quantitative/Conceptual problems (indicated in the Annotated Instructor’s Edition) contain parts that ask students to think both quantitatively and conceptually. An example of a Quantitative/Conceptual problem appears here:

The problem is identified in the Annotated Instructor’s Edition with a **blue** icon.

Parts (a)–(c) of the problem ask for quantitative calculations.

59. A horizontal spring attached to a wall has a force constant of 850 N/m . A block of mass 1.00 kg is attached to the spring and rests on a frictionless, horizontal surface as in Figure P8.59. (a) The block is pulled to a position 6.00 cm from equilibrium and released. Find the elastic potential energy stored in the spring when the block is 6.00 cm from equilibrium and when the block passes through equilibrium. (b) Find the speed of the block as it passes through the equilibrium point. (c) What is the speed of the block when it is at a position $1/2 \cdot 3.00 \text{ cm}$? (d) Why isn’t the answer to part (c) half the answer to part (b)?

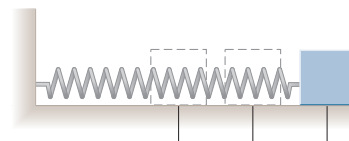


Figure P8.59

Part (d) asks a conceptual question about the situation.

■ *Symbolic problems* (indicated in the Annotated Instructor's Edition) ask students to solve a problem using only symbolic manipulation. Reviewers of the Eighth Edition (as well as the majority of respondents to a large survey) asked specifically for an increase in the number of symbolic problems found in the text because it better reflects the way instructors want their students to think when solving physics problems. An example of a Symbolic problem appears here:

The problem is identified in the Annotated Instructor's Edition with a ■ icon.

51. A truck is moving with constant acceleration up a hill that makes an angle with the horizontal as in Figure P6.51. A small sphere of mass is suspended from the ceiling of the truck by a light cord. If the pendulum makes a constant angle with the perpendicular to the ceiling, what is

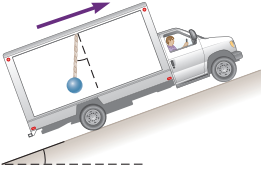


Figure P6.51

The figure shows only symbolic quantities.

The answer to the problem is purely symbolic.

51. $(\cos \tan \sin$

■ *Guided Problems* help students break problems into steps. A physics problem typically asks for one physical quantity in a given context. Often, however, several concepts must be used and a number of calculations are required to obtain that final answer. Many students are not accustomed to this level of complexity and often don't know where to start. A Guided Problem breaks a standard problem into smaller steps, enabling students to grasp all the concepts and strategies required to arrive at a correct solution. Unlike standard physics problems, guidance is often built into the problem statement. Guided Problems are reminiscent of how a student might interact with a professor in an office visit. These problems (there is one in every chapter of the text) help train students to break down complex problems into a series of simpler problems, an essential problem-solving skill. An example of a Guided Problem appears here:

The problem is identified with a ■ icon.

38. A uniform beam resting on two pivots has a length 6.00 m and mass 90.0 kg. The pivot under the left end exerts a normal force on the beam, and the second pivot located a distance 4.00 m from the left end exerts a normal force . A woman of mass 55.0 kg steps onto the left end of the beam and begins walking to the right as in Figure P12.38. The goal is to find the woman's position when the beam begins to tip. (a) What is the appropriate analysis model for the beam before it begins to tip? (b) Sketch a force diagram for the beam, labeling the gravitational and normal forces acting on the beam and placing the woman a distance to the right of the first pivot, which is the origin. (c) Where is the woman when the normal force is the greatest? (d) What is when the beam is about to tip? (e) Use Equation 12.1 to find the value of when the beam is about to tip. (f) Using the result of part (d) and Equation 12.2, with torques computed around the second pivot, find the woman's position when the beam is about to tip. (g) Check the answer to part (e) by computing torques around the first pivot point.

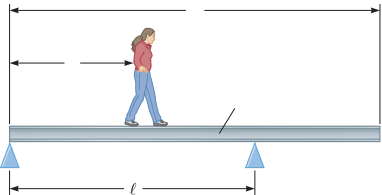


Figure P12.38

The goal of the problem is identified.

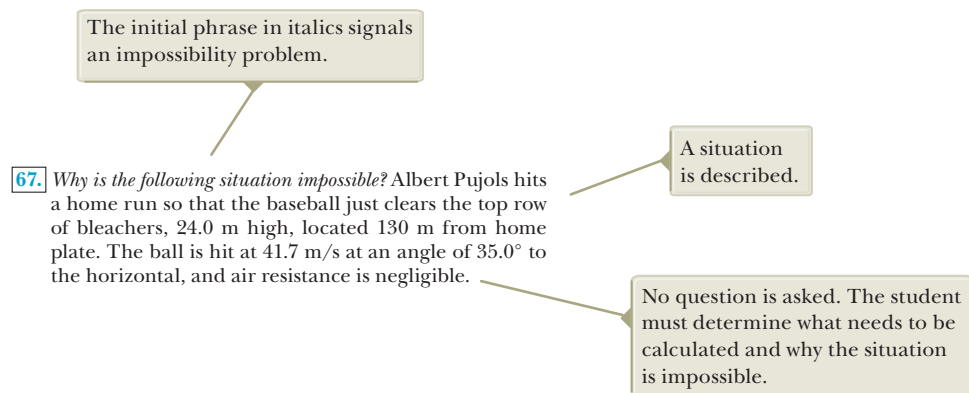
Analysis begins by identifying the appropriate analysis model.

Students are provided with suggestions for steps to solve the problem.

The calculation associated with the goal is requested.

Impossibility problems. Physics education research has focused heavily on the problem-solving skills of students. Although most problems in this text are structured in the form of providing data and asking for a result of computation, two problems in each chapter, on average, are structured as impossibility problems. They begin with the phrase *Why is the following situation impossible?* That is followed by the description of a situation. The striking aspect of these problems is that no question is asked of the students, other than that in the initial italics. The student must determine what questions need to be asked and what calculations need to be performed. Based on the results of these calculations, the student must determine why the situation described is not possible. This determination may require information from personal experience, common sense, Internet or print research, measurement, mathematical skills, knowledge of human norms, or scientific thinking.

These problems can be assigned to build critical thinking skills in students. They are also fun, having the aspect of physics “mysteries” to be solved by students individually or in groups. An example of an impossibility problem appears here:



Paired problems. These problems are otherwise identical, one asking for a numerical solution and one asking for a symbolic derivation. There are now three pairs of these problems in most chapters, indicated in the Annotated Instructor’s Edition by cyan shading in the end-of-chapter problems set.



Biomedical problems. These problems (indicated in the Annotated Instructor’s Edition with a ■ icon) highlight the relevance of physics principles to those students taking this course who are majoring in one of the life sciences.

Review problems. Many chapters include review problems requiring the student to combine concepts covered in the chapter with those discussed in previous chapters. These problems (marked **Review**) reflect the cohesive nature of the principles in the text and verify that physics is not a scattered set of ideas. When facing a real-world issue such as global warming or nuclear weapons, it may be necessary to call on ideas in physics from several parts of a textbook such as this one.

“Fermi problems.” One or more problems in most chapters ask the student to reason in order-of-magnitude terms.

Design problems. Several chapters contain problems that ask the student to determine design parameters for a practical device so that it can function as required.

Calculus-based problems. Every chapter contains at least one problem applying ideas and methods from differential calculus and one problem using integral calculus.

Integration with Enhanced WebAssign. The textbook's tight integration with Enhanced WebAssign content facilitates an online learning environment that helps students improve their problem-solving skills and gives them a variety of tools to meet their individual learning styles. Extensive user data gathered by WebAssign were used to ensure that the problems most often assigned were retained for this new edition. In each chapter's problems set, the top quartile of problems assigned in Enhanced WebAssign have cyan-shaded problem numbers in the Annotated Instructor's Edition for easy identification, allowing professors to quickly and easily find the most popular problems assigned in Enhanced WebAssign. New Analysis Model tutorials added for this edition have already been discussed (see page x). Master It tutorials help students solve problems by having them work through a stepped-out solution. Problems with Master It tutorials are indicated in each chapter's problem set with a  icon. In addition, Watch It solution videos are indicated in each chapter's problem set with a  icon and explain fundamental problem-solving strategies to help students step through the problem.

Artwork. Every piece of artwork in the Ninth Edition is in a modern style that helps express the physics principles at work in a clear and precise fashion. *Focus pointers* are included with many figures in the text; these either point out important aspects of a figure or guide students through a process illustrated by the artwork or photo. This format helps those students who are more visual learners. An example of a figure with a focus pointer appears below.

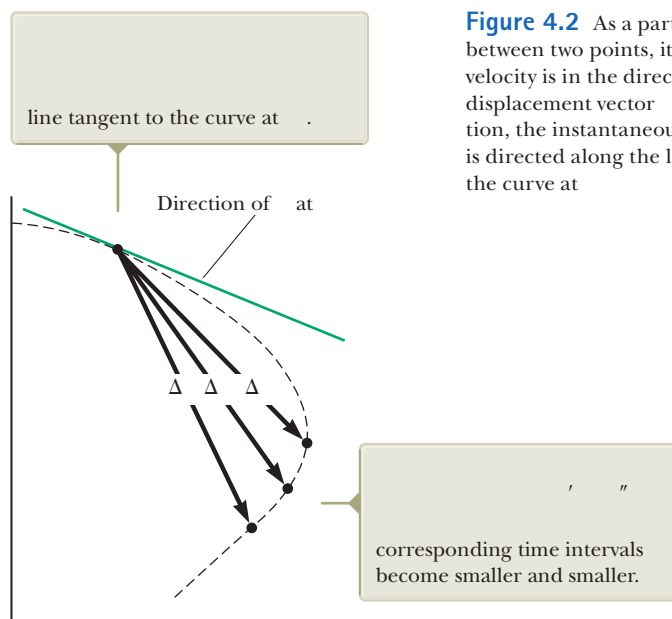


Figure 4.2 As a particle moves between two points, its average velocity is in the direction of the displacement vector . By definition, the instantaneous velocity at is directed along the line tangent to the curve at

Math Appendix. The math appendix (Appendix B), a valuable tool for students, shows the math tools in a physics context. This resource is ideal for students who need a quick review on topics such as algebra, trigonometry, and calculus.

Helpful Features

Style. To facilitate rapid comprehension, we have written the book in a clear, logical, and engaging style. We have chosen a writing style that is somewhat informal and relaxed so that students will find the text appealing and enjoyable to read. New terms are carefully defined, and we have avoided the use of jargon.

Important Definitions and Equations. Most important definitions are set in **bold-face** or are highlighted with a **background screen** for added emphasis and ease of review. Similarly, important equations are also highlighted with a background screen to facilitate location.

Marginal Notes. Comments and notes appearing in the margin with a ► icon can be used to locate important statements, equations, and concepts in the text.

Pedagogical Use of Color. Readers should consult the **pedagogical color chart** (inside the front cover) for a listing of the color-coded symbols used in the text diagrams. This system is followed consistently throughout the text.

Mathematical Level. We have introduced calculus gradually, keeping in mind that students often take introductory courses in calculus and physics concurrently. Most steps are shown when basic equations are developed, and reference is often made to mathematical appendices near the end of the textbook. Although vectors are discussed in detail in Chapter 3, vector products are introduced later in the text, where they are needed in physical applications. The dot product is introduced in Chapter 7, which addresses energy of a system; the cross product is introduced in Chapter 11, which deals with angular momentum.

Significant Figures. In both worked examples and end-of-chapter problems, significant figures have been handled with care. Most numerical examples are worked to either two or three significant figures, depending on the precision of the data provided. End-of-chapter problems regularly state data and answers to three-digit precision. When carrying out estimation calculations, we shall typically work with a single significant figure. (More discussion of significant figures can be found in Chapter 1, pages 11–13.)

Units. The international system of units (SI) is used throughout the text. The U.S. customary system of units is used only to a limited extent in the chapters on mechanics and thermodynamics.

Appendices and Endpapers. Several appendices are provided near the end of the textbook. Most of the appendix material represents a review of mathematical concepts and techniques used in the text, including scientific notation, algebra, geometry, trigonometry, differential calculus, and integral calculus. Reference to these appendices is made throughout the text. Most mathematical review sections in the appendices include worked examples and exercises with answers. In addition to the mathematical reviews, the appendices contain tables of physical data, conversion factors, and the SI units of physical quantities as well as a periodic table of the elements. Other useful information—fundamental constants and physical data, planetary data, a list of standard prefixes, mathematical symbols, the Greek alphabet, and standard abbreviations of units of measure—appears on the endpapers.



CengageCompose Options for *Physics for Scientists and Engineers*

Would you like to easily create your own personalized text, selecting the elements that meet your specific learning objectives?

CengageCompose puts the power of the vast Cengage Learning library of learning content at your fingertips to create exactly the text you need. The all-new, Web-based CengageCompose site lets you quickly scan content and review materials to pick what you need for your text. Site tools let you easily assemble the modular learning units into the order you want and immediately provide you with an online copy for review. Add enrichment content like case studies, exercises, and lab materials to

further build your ideal learning materials. Even choose from hundreds of vivid, art-rich, customizable, full-color covers.

Cengage Learning offers the fastest and easiest way to create unique customized learning materials delivered the way you want. For more information about custom publishing options, visit www.cengage.com/custom or contact your local Cengage Learning representative.

Course Solutions That Fit Your Teaching Goals and Your Students' Learning Needs

Recent advances in educational technology have made homework management systems and audience response systems powerful and affordable tools to enhance the way you teach your course. Whether you offer a more traditional text-based course, are interested in using or are currently using an online homework management system such as Enhanced WebAssign, or are ready to turn your lecture into an interactive learning environment with JoinIn, you can be confident that the text's proven content provides the foundation for each and every component of our technology and ancillary package.

Homework Management Systems

Enhanced WebAssign for *Physics for Scientists and Engineers, Ninth Edition*. Exclusively from Cengage Learning, Enhanced WebAssign offers an extensive online program for physics to encourage the practice that's so critical for concept mastery. The meticulously crafted pedagogy and exercises in our proven texts become even more effective in Enhanced WebAssign. Enhanced WebAssign includes the Cengage YouBook, a highly customizable, interactive eBook. WebAssign includes:



- All of the quantitative end-of-chapter problems
- Selected problems enhanced with targeted feedback. An example of targeted feedback appears below:

Selected problems include feedback to address common mistakes that students make. This feedback was developed by professors with years of classroom experience.

A fish swimming in a horizontal plane has velocity $\vec{v}_i = (4\hat{i} + 1\hat{j})$ m/s at a point in the ocean where the position relative to a certain rock is $\vec{r}_i = (10\hat{i} - 4\hat{j})$ m. After the fish swims with constant acceleration for 20 s, its velocity is $\vec{v}_f = (20\hat{i} - 4\hat{j})$ m/s.

(a) What are the components of the acceleration?

$a_x = 3$ m/s^2 ✗

You appear to have interchanged the position and velocity values.

$a_y = 05$ m/s^2 ✗

Acceleration is determined from the change in velocity in this time interval.

(b) What is the direction of the acceleration with respect to unit vector \hat{i} ?

-358.5 $^\circ$ ✗ (counterclockwise from the $+\hat{x}$ -axis is positive)

You appear to have correctly calculated the angle using your incorrect values from part (a).

(c) If the fish maintains constant acceleration, where is it at $t = 20$ s?

$x =$ m ✗

$y =$ m ✗

In what direction is it moving?

$^\circ$ ✗ (counterclockwise from the $+\hat{x}$ -axis is positive)

Need Help? [Read It](#) [Watch It](#) [Master It](#) [Chat About It](#)

Master It tutorials (indicated in the text by a ■ icon), to help students work through the problem one step at a time. An example of a Master It tutorial appears on page xxiv:

Master It

A fish swimming in a horizontal plane has velocity $\vec{v}_i = (3.00 \hat{i} + 1.00 \hat{j})$ m/s at a point in the ocean where the position relative to a certain rock is $\vec{r}_i = (6.00 \hat{i} - 3.7 \hat{j})$ m. After the fish swims with constant acceleration for 12.0 s, its velocity is $\vec{v} = (22.0 \hat{i} - 15 \hat{j})$ m/s.

(a) What are the components of the acceleration?
 (b) What is the direction of the acceleration with respect to unit vector \hat{i} ?
 (c) If the fish maintains constant acceleration, where is it at $t = 21.0$ s?

Part 1 of 7 - Conceptualize

The fish is speeding up and changing direction. We choose to write separate equations about the x and y components of its motion.

[Continue](#)

Part 2 of 7 - Categorize

Model the fish as a particle under constant acceleration. We use our old standard equations for constant-acceleration straight line motion, with x and y subscripts to make them apply to parts of the whole motion.

Part 3 of 7 - Analyze (a)

At $t = 0$, the initial velocity $\vec{v} = (3.00 \hat{i} + 1.00 \hat{j})$ m/s and the initial position vector $\vec{r}_i = (6.00 \hat{i} - 3.7 \hat{j})$ m

At the first 'final' point we consider, 12.0 s later, $\vec{v} = (22.0 \hat{i} - 15 \hat{j})$ m/s


$$a_x = \frac{\Delta v_x}{\Delta t} = \frac{22.0 \text{ m/s} - 3 \text{ m/s}}{12.0 \text{ s}} = 1.1 \text{ m/s}^2$$

$$a_y = \frac{\Delta v_y}{\Delta t} = \frac{-15 \text{ m/s} - 1.00 \text{ m/s}}{12.0 \text{ s}} = -1.4 \text{ m/s}^2$$

[Submit](#) [Skip](#)


Master It tutorials help students organize what they need to solve a problem with *Conceptualize* and *Categorize* sections before they work through each step.

Master It tutorials help students work through each step of the problem.

Watch It solution videos (indicated in the text by a  icon) that explain fundamental problem-solving strategies, to help students step through the problem. In addition, instructors can choose to include video hints of problem-solving strategies. A screen shot from a Watch It solution video appears below:

A projectile is launched at some angle to the horizontal with some initial speed v , and air resistance is negligible.

(a) Is the projectile a freely falling body?
 (b) What is its acceleration in the vertical direction?
 (c) What is its acceleration in the horizontal direction?



Watch It solution videos help students visualize the steps needed to solve a problem.

Concept Checks

PhET simulations

Most worked examples, enhanced with hints and feedback, to help strengthen students' problem-solving skills

Every Quick Quiz, giving your students ample opportunity to test their conceptual understanding

PreLecture Explorations. The Active Figure questions in WebAssign have been completely revised. The simulations have been updated, with additional parameters to enhance investigation of a physical phenomenon. Students can make predictions, change the parameters, and then observe the results. Each new PreLecture Exploration comes with conceptual and analytical questions, which guide students to a deeper understanding and help promote a robust physical intuition.

Analysis Model tutorials. John Jewett developed 165 tutorials (indicated in each chapter's problem set with an  icon) that strengthen students' problem-solving skills by guiding them through the steps in the problem-solving process.

Important first steps include making predictions and focusing strategy on physics concepts before starting to solve the problem quantitatively. A critical component of these tutorials is the selection of an appropriate Analysis Model to describe what is going on in the problem. This step allows students to make the important link between the situation in the problem and the mathematical representation of the situation. Analysis Model tutorials include meaningful feedback at each step to help students practice the problem-solving process and improve their skills. In addition, the feedback addresses student misconceptions and helps them to catch algebraic and other mathematical errors. Solutions are carried out symbolically as long as possible, with numerical values substituted at the end. This feature helps students to understand the effects of changing the values of each variable in the problem, avoids unnecessary repetitive substitution of the same numbers, and eliminates round-off errors. Feedback at the end of the tutorial encourages students to think about how the final answer compares to their original predictions.

- **Personalized Study Plan.** The Personal Study Plan in Enhanced WebAssign provides chapter and section assessments that show students what material they know and what areas require more work. For items that they answer incorrectly, students can click on links to related study resources such as videos, tutorials, or reading materials. Color-coded progress indicators let them see how well they are doing on different topics. You decide what chapters and sections to include—and whether to include the plan as part of the final grade or as a study guide with no scoring involved.
- **The Cengage YouBook.** WebAssign has a customizable and interactive eBook, the **Cengage YouBook**, that lets you tailor the textbook to fit your course and connect with your students. You can remove and rearrange chapters in the table of contents and tailor assigned readings that match your syllabus exactly. Powerful editing tools let you change as much as you'd like—or leave it just like it is. You can highlight key passages or add sticky notes to pages to comment on a concept in the reading, and then share any of these individual notes and highlights with your students, or keep them personal. You can also edit narrative content in the textbook by adding a text box or striking out text. With a handy link tool, you can drop in an icon at any point in the eBook that lets you link to your own lecture notes, audio summaries, video lectures, or other files on a personal Web site or anywhere on the Web. A simple YouTube widget lets you easily find and embed videos from YouTube directly into eBook pages. The Cengage YouBook helps students go beyond just reading the textbook. Students can also highlight the text, add their own notes, and bookmark the text. Animations play right on the page at the point of learning so that they're not speed bumps to reading but true enhancements. Please visit www.webassign.net/brookscole to view an interactive demonstration of Enhanced WebAssign.
- Offered exclusively in WebAssign, **Quick Prep** for physics is algebra and trigonometry math remediation within the context of physics applications and principles. Quick Prep helps students succeed by using narratives illustrated throughout with video examples. The Master It tutorial problems allow students to assess and retune their understanding of the material. The Practice Problems that go along with each tutorial allow both the student and the instructor to test the student's understanding of the material.

Quick Prep includes the following features:

- 67 interactive tutorials
- 67 additional practice problems
- A thorough overview of each topic, including video examples
- Can be taken before the semester begins or during the first few weeks of the course
- Can also be assigned alongside each chapter for “just in time” remediation

Topics include units, scientific notation, and significant figures; the motion of objects along a line; functions; approximation and graphing; probability and error; vectors, displacement, and velocity; spheres; force and vector projections.



MindTap™: The Personal Learning Experience

MindTap for Serway and Jewett *Physics for Scientists and Engineers* is a personalized, fully online digital learning platform of authoritative textbook content, assignments, and services that engages your students with interactivity while also offering you choice in the configuration of coursework and enhancement of the curriculum via complimentary Web-apps known as MindApps. MindApps range from ReadSpeaker (which reads the text out loud to students), to Kaltura (allowing you to insert inline video and audio into your curriculum), to ConnectYard (allowing you to create digital “yards” through social media—all without “friending” your students). MindTap is well beyond an eBook, a homework solution or digital supplement, a resource center Web site, a course delivery platform, or a Learning Management System. It is the first in a new category—the Personal Learning Experience.



CengageBrain.com

On **CengageBrain.com** students will be able to save up to 60% on their course materials through our full spectrum of options. Students will have the option to rent their textbooks, purchase print textbooks, e-textbooks, or individual e-chapters and audio books all for substantial savings over average retail prices. **CengageBrain.com** also includes access to Cengage Learning’s broad range of homework and study tools and features a selection of free content.



Lecture Presentation Resources

PowerLecture with ExamView® and JoinIn for *Physics for Scientists and Engineers, Ninth Edition*. Bringing physics principles and concepts to life in your lectures has never been easier! The full-featured, two-volume **PowerLecture** Instructor’s Resource DVD-ROM (Volume 1: Chapters 1–22; Volume 2: Chapters 23–46) provides everything you need for *Physics for Scientists and Engineers, Ninth Edition*. Key content includes the *Instructor’s Solutions Manual*, art and images from the text, pre-made chapter-specific PowerPoint lectures, ExamView test generator software with pre-loaded test questions, JoinIn response-system “clickers,” Active Figures animations, and a physics movie library.



JoinIn. Assessing to Learn in the Classroom questions developed at the University of Massachusetts Amherst. This collection of 250 advanced conceptual questions has been tested in the classroom for more than ten years and takes peer learning to a new level. JoinIn helps you turn your lectures into an interactive learning environment that promotes conceptual understanding. Available exclusively for higher education from our partnership with Turning Technologies, JoinIn™ is the easiest way to turn your lecture hall into a personal, fully interactive experience for your students!

Assessment and Course Preparation Resources

A number of resources listed below will assist with your assessment and preparation processes.

Instructor’s Solutions Manual by Vahé Peroomian (University of California at Los Angeles). Thoroughly revised for this edition, the *Instructor’s Solutions Manual* contains complete worked solutions to all end-of-chapter problems in the textbook as well as answers to the even-numbered problems and all the questions. The solutions to problems new to the Ninth Edition are marked for easy identification. Volume 1 contains Chapters 1 through 22; Volume 2 contains Chapters 23 through 46. Electronic files of the *Instructor’s Solutions Manual* are available on the PowerLecture™ DVD-ROM.

Test Bank by Ed Oberhofer (University of North Carolina at Charlotte and Lake Sumter Community College). The test bank is available on the two-volume PowerLecture™ DVD-ROM via the ExamView® test software. This two-volume test bank contains approximately 2 000 multiple-choice questions. Instructors may print and duplicate pages for distribution to students. Volume 1 contains Chapters 1 through 22, and Volume 2 contains Chapters 23 through 46. WebCT and Blackboard versions of the test bank are available on the instructor's companion site at www.CengageBrain.com.

Instructor's Companion Web Site. Consult the instructor's site by pointing your browser to www.CengageBrain.com for a problem correlation guide, PowerPoint lectures, and JoinIn audience response content. Instructors adopting the Ninth Edition of *Physics for Scientists and Engineers* may download these materials after securing the appropriate password from their local sales representative.

Supporting Materials for the Instructor

Supporting instructor materials are available to qualified adopters. Please consult your local Cengage Learning, Brooks/Cole representative for details. Visit www.CengageBrain.com to

- request a desk copy
- locate your local representative
- download electronic files of select support materials

Student Resources

Visit the *Physics for Scientists and Engineers* Web site at www.cengagebrain.com/shop/ISBN/9781133954156 to see samples of select student supplements. Go to [CengageBrain.com](http://www.CengageBrain.com) to purchase and access this product at Cengage Learning's preferred online store.

The logo for Cengage Learning's Brain.com platform, featuring the word "CENGAGE" in blue and "brain.com" in green.

Student Solutions Manual/Study Guide by John R. Gordon, Vahé Peroomian, Raymond A. Serway, and John W. Jewett, Jr. This two-volume manual features detailed solutions to 20% of the end-of-chapter problems from the text. The manual also features a list of important equations, concepts, and notes from key sections of the text in addition to answers to selected end-of-chapter questions. Volume 1 contains Chapters 1 through 22; and Volume 2 contains Chapters 23 through 46.

Physics Laboratory Manual, Third Edition by David Loyd (Angelo State University) supplements the learning of basic physical principles while introducing laboratory procedures and equipment. Each chapter includes a prelaboratory assignment, objectives, an equipment list, the theory behind the experiment, experimental procedures, graphing exercises, and questions. A laboratory report form is included with each experiment so that the student can record data, calculations, and experimental results. Students are encouraged to apply statistical analysis to their data. A complete *Instructor's Manual* is also available to facilitate use of this lab manual.

Physics Laboratory Experiments, Seventh Edition by Jerry D. Wilson (Lander College) and Cecilia A. Hernández (American River College). This market-leading manual for the first-year physics laboratory course offers a wide range of class-tested experiments designed specifically for use in small to midsize lab programs. A series of integrated experiments emphasizes the use of computerized instrumentation and includes a set of "computer-assisted experiments" to allow students and instructors to gain experience with modern equipment. This option also enables instructors to determine the appropriate balance between traditional and computer-based experiments for their courses. By analyzing data through two different methods, students gain a greater understanding of the concepts behind the experiments. The Seventh Edition is updated with the latest information and techniques involving state-of-the-art equipment and a new Guided Learning feature addresses

the growing interest in guided-inquiry pedagogy. Fourteen additional experiments are also available through custom printing.

Teaching Options

The topics in this textbook are presented in the following sequence: classical mechanics, oscillations and mechanical waves, and heat and thermodynamics, followed by electricity and magnetism, electromagnetic waves, optics, relativity, and modern physics. This presentation represents a traditional sequence, with the subject of mechanical waves being presented before electricity and magnetism. Some instructors may prefer to discuss both mechanical and electromagnetic waves together after completing electricity and magnetism. In this case, Chapters 16 through 18 could be covered along with Chapter 34. The chapter on relativity is placed near the end of the text because this topic often is treated as an introduction to the era of “modern physics.” If time permits, instructors may choose to cover Chapter 39 after completing Chapter 13 as a conclusion to the material on Newtonian mechanics. For those instructors teaching a two-semester sequence, some sections and chapters could be deleted without any loss of continuity. The following sections can be considered optional for this purpose:

2.8	Kinematic Equations Derived from Calculus	31.6	Eddy Currents
4.6	Relative Velocity and Relative Acceleration	33.9	Rectifiers and Filters
6.3	Motion in Accelerated Frames	34.6	Production of Electromagnetic Waves by an Antenna
6.4	Motion in the Presence of Resistive Forces	36.5	Lens Aberrations
7.9	Energy Diagrams and Equilibrium of a System	36.6	The Camera
9.9	Rocket Propulsion	36.7	The Eye
11.5	The Motion of Gyroscopes and Tops	36.8	The Simple Magnifier
14.7	Other Applications of Fluid Dynamics	36.9	The Compound Microscope
15.6	Damped Oscillations	36.10	The Telescope
15.7	Forced Oscillations	38.5	Diffraction of X-Rays by Crystals
18.6	Standing Waves in Rods and Membranes	39.9	The General Theory of Relativity
18.8	Nonsinusoidal Wave Patterns	41.6	Applications of Tunneling
25.7	The Millikan Oil-Drop Experiment	42.9	Spontaneous and Stimulated Transitions
25.8	Applications of Electrostatics	42.10	Lasers
26.7	An Atomic Description of Dielectrics	43.7	Semiconductor Devices
27.5	Superconductors	43.8	Superconductivity
28.5	Household Wiring and Electrical Safety	44.8	Nuclear Magnetic Resonance and Magnetic Resonance Imaging
29.3	Applications Involving Charged Particles Moving in a Magnetic Field	45.5	Radiation Damage
29.6	The Hall Effect	45.6	Uses of Radiation
30.6	Magnetism in Matter		

Acknowledgments

This Ninth Edition of *Physics for Scientists and Engineers* was prepared with the guidance and assistance of many professors who reviewed selections of the manuscript, the prerevision text, or both. We wish to acknowledge the following scholars and express our sincere appreciation for their suggestions, criticisms, and encouragement:

Benjamin C. Bromley, *University of Utah*; Elena Flitsyan, *University of Central Florida*; Yuankun Lin, *University of North Texas*; Allen Mincer, *New York University*; Yibin Pan, *University of Wisconsin–Madison*; N. M. Ravindra, *New Jersey Institute of Technology*; Masao Sako, *University of Pennsylvania*; Charles Stone, *Colorado School of Mines*; Robert Weidman, *Michigan Technological University*; Michael Winokur, *University of Wisconsin–Madison*

Prior to our work on this revision, we conducted a survey of professors; their feedback and suggestions helped shape this revision, and so we would like to thank the survey participants:

Elise Adamson, *Wayland Baptist University*; Saul Adelman, *The Citadel*; Yiyang Bai, *Houston Community College*; Philip Blanco, *Grossmont College*; Ken Bolland, *Ohio State University*; Michael Butros, *Victor Valley College*; Brian Carter, *Grossmont College*; Jennifer Cash, *South Carolina State University*; Soumitra Chattopadhyay, *Georgia Highlands College*; John Cooper, *Brazosport College*; Gregory Dolise, *Harrisburg Area Community College*; Mike Durren, *Lake Michigan College*; Tim Farris, *Volunteer State Community College*; Mirela Fetea, *University of Richmond*; Susan Foreman, *Danville Area Community College*; Richard Gottfried, *Frederick Community College*; Christopher Gould, *University of Southern California*; Benjamin Grinstein, *University of California, San Diego*; Wayne Guinn, *Lon Morris College*; Joshua Guttman, *Bergen Community College*; Carlos Handy, *Texas Southern University*; David Heskett, *University of Rhode Island*; Ed Hungerford, *University of Houston*; Matthew Hyre, *Northwestern College*; Charles Johnson, *South Georgia College*; Lynne Lawson, *Providence College*; Byron Leles, *Northeast Alabama Community College*; Rizwan Mahmood, *Slippery Rock University*; Virginia Makepeace, *Kankakee Community College*; David Marasco, *Foothill College*; Richard McCorkle, *University of Rhode Island*; Brian Moudry, *Davis & Elkins College*; Charles Nickles, *University of Massachusetts Dartmouth*; Terrence O'Neill, *Riverside Community College*; Grant O'Rielly, *University of Massachusetts Dartmouth*; Michael Ottinger, *Missouri Western State University*; Michael Panunto, *Butte College*; Eugenia Peterson, *Richard J. Daley College*; Robert Pompei, *Binghamton University, State University of New York*; Ralph Popp, *Mercer County Community College*; Craig Rabatin, *West Virginia University at Parkersburg*; Marilyn Rands, *Lawrence Technological University*; Christina Reeves-Shull, *Cedar Valley College*; John Rollino, *Rutgers University, Newark*; Rich Schelp, *Erskine College*; Mark Semon, *Bates College*; Walther Spjeldvik, *Weber State University*; Mark Spraker, *North Georgia College and State University*; Julie Talbot, *University of West Georgia*; James Tressel, *Massasoit Community College*; Bruce Unger, *Wenatchee Valley College*; Joan Vogtman, *Potomac State College*

This title was carefully checked for accuracy by Grant Hart, *Brigham Young University*; James E. Rutledge, *University of California at Irvine*; and Som Tyagi, *Drexel University*. We thank them for their diligent efforts under schedule pressure.

Belal Abas, Zinovi Akkerman, Eric Boyd, Hal Falk, Melanie Martin, Steve McCauley, and Glenn Stracher made corrections to problems taken from previous editions. Harvey Leff provided invaluable guidance on the restructuring of the discussion of entropy in Chapter 22. We are grateful to authors John R. Gordon and Vahé Perroomian for preparing the *Student Solutions Manual/Study Guide* and to Vahé Perroomian for preparing an excellent *Instructor's Solutions Manual*. Susan English carefully edited and improved the test bank. Linnea Cookson provided an excellent accuracy check of the Analysis Model tutorials.

Special thanks and recognition go to the professional staff at the Brooks/Cole Publishing Company—in particular, Charles Hartford, Ed Dodd, Stephanie VanCamp, Rebecca Berardy Schwartz, Tom Ziolkowski, Alison Eigel Zade, Cate Barr, and Brendan Killion (who managed the ancillary program)—for their fine work during the development, production, and promotion of this textbook. We recognize the skilled production service and excellent artwork provided by the staff at Lachina Publishing Services and the dedicated photo research efforts of Christopher Arena at the Bill Smith Group.

Finally, we are deeply indebted to our wives, children, and grandchildren for their love, support, and long-term sacrifices.

Raymond A. Serway
St. Petersburg, Florida

John W. Jewett, Jr.
Anaheim, California

To the Student

It is appropriate to offer some words of advice that should be of benefit to you, the student. Before doing so, we assume you have read the Preface, which describes the various features of the text and support materials that will help you through the course.

How to Study

Instructors are often asked, “How should I study physics and prepare for examinations?” There is no simple answer to this question, but we can offer some suggestions based on our own experiences in learning and teaching over the years.

First and foremost, maintain a positive attitude toward the subject matter, keeping in mind that physics is the most fundamental of all natural sciences. Other science courses that follow will use the same physical principles, so it is important that you understand and are able to apply the various concepts and theories discussed in the text.

Concepts and Principles

It is essential that you understand the basic concepts and principles before attempting to solve assigned problems. You can best accomplish this goal by carefully reading the textbook before you attend your lecture on the covered material. When reading the text, you should jot down those points that are not clear to you. Also be sure to make a diligent attempt at answering the questions in the **Quick Quizzes** as you come to them in your reading. We have worked hard to prepare questions that help you judge for yourself how well you understand the material. Study the **What If?** features that appear in many of the worked examples carefully. They will help you extend your understanding beyond the simple act of arriving at a numerical result. The Pitfall Preventions will also help guide you away from common misunderstandings about physics. During class, take careful notes and ask questions about those ideas that are unclear to you. Keep in mind that few people are able to absorb the full meaning of scientific material after only one reading; several readings of the text and your notes may be necessary. Your lectures and laboratory work supplement the textbook and should clarify some of the more difficult material. You should minimize your memorization of material. Successful memorization of passages from the text, equations, and derivations does not necessarily indicate that you understand the material. Your understanding of the material will be enhanced through a combination of efficient study habits, discussions with other students and with instructors, and your ability to solve the problems presented in the textbook. Ask questions whenever you believe that clarification of a concept is necessary.

Study Schedule

It is important that you set up a regular study schedule, preferably a daily one. Make sure that you read the syllabus for the course and adhere to the schedule set by your instructor. The lectures will make much more sense if you read the corresponding text material *before* attending them. As a general rule, you should devote about two hours of study time for each hour you are in class. If you are having trouble with the

course, seek the advice of the instructor or other students who have taken the course. You may find it necessary to seek further instruction from experienced students. Very often, instructors offer review sessions in addition to regular class periods. Avoid the practice of delaying study until a day or two before an exam. More often than not, this approach has disastrous results. Rather than undertake an all-night study session before a test, briefly review the basic concepts and equations, and then get a good night's rest. If you believe that you need additional help in understanding the concepts, in preparing for exams, or in problem solving, we suggest that you acquire a copy of the *Student Solutions Manual/Study Guide* that accompanies this textbook.

Visit the *Physics for Scientists and Engineers* Web site at www.cengagebrain.com/shop/ISBN/9781133954156 to see samples of select student supplements. You can purchase any Cengage Learning product at your local college store or at our preferred online store **CengageBrain.com**.

Use the Features

You should make full use of the various features of the text discussed in the Preface. For example, marginal notes are useful for locating and describing important equations and concepts, and **boldface** indicates important definitions. Many useful tables are contained in the appendices, but most are incorporated in the text where they are most often referenced. Appendix B is a convenient review of mathematical tools used in the text.

Answers to Quick Quizzes and odd-numbered problems are given at the end of the textbook, and solutions to selected end-of-chapter questions and problems are provided in the *Student Solutions Manual/Study Guide*. The table of contents provides an overview of the entire text, and the index enables you to locate specific material quickly. Footnotes are sometimes used to supplement the text or to cite other references on the subject discussed.

After reading a chapter, you should be able to define any new quantities introduced in that chapter and discuss the principles and assumptions that were used to arrive at certain key relations. The chapter summaries and the review sections of the *Student Solutions Manual/Study Guide* should help you in this regard. In some cases, you may find it necessary to refer to the textbook's index to locate certain topics. You should be able to associate with each physical quantity the correct symbol used to represent that quantity and the unit in which the quantity is specified. Furthermore, you should be able to express each important equation in concise and accurate prose.

Problem Solving

R. P. Feynman, Nobel laureate in physics, once said, "You do not know anything until you have practiced." In keeping with this statement, we strongly advise you to develop the skills necessary to solve a wide range of problems. Your ability to solve problems will be one of the main tests of your knowledge of physics; therefore, you should try to solve as many problems as possible. It is essential that you understand basic concepts and principles before attempting to solve problems. It is good practice to try to find alternate solutions to the same problem. For example, you can solve problems in mechanics using Newton's laws, but very often an alternative method that draws on energy considerations is more direct. You should not deceive yourself into thinking that you understand a problem merely because you have seen it solved in class. You must be able to solve the problem and similar problems on your own.

The approach to solving problems should be carefully planned. A systematic plan is especially important when a problem involves several concepts. First, read the problem several times until you are confident you understand what is being asked. Look for any key words that will help you interpret the problem and perhaps allow you to make certain assumptions. Your ability to interpret a question properly is

an integral part of problem solving. Second, you should acquire the habit of writing down the information given in a problem and those quantities that need to be found; for example, you might construct a table listing both the quantities given and the quantities to be found. This procedure is sometimes used in the worked examples of the textbook. Finally, after you have decided on the method you believe is appropriate for a given problem, proceed with your solution. The General Problem-Solving Strategy will guide you through complex problems. If you follow the steps of this procedure (*Conceptualize, Categorize, Analyze, Finalize*), you will find it easier to come up with a solution and gain more from your efforts. This strategy, located at the end of Chapter 2 (pages 45–47), is used in all worked examples in the remaining chapters so that you can learn how to apply it. Specific problem-solving strategies for certain types of situations are included in the text and appear with a special heading. These specific strategies follow the outline of the General Problem-Solving Strategy.

Often, students fail to recognize the limitations of certain equations or physical laws in a particular situation. It is very important that you understand and remember the assumptions that underlie a particular theory or formalism. For example, certain equations in kinematics apply only to a particle moving with constant acceleration. These equations are not valid for describing motion whose acceleration is not constant, such as the motion of an object connected to a spring or the motion of an object through a fluid. Study the Analysis Models for Problem Solving in the chapter summaries carefully so that you know how each model can be applied to a specific situation. The analysis models provide you with a logical structure for solving problems and help you develop your thinking skills to become more like those of a physicist. Use the analysis model approach to save you hours of looking for the correct equation and to make you a faster and more efficient problem solver.

Experiments

Physics is a science based on experimental observations. Therefore, we recommend that you try to supplement the text by performing various types of “hands-on” experiments either at home or in the laboratory. These experiments can be used to test ideas and models discussed in class or in the textbook. For example, the common Slinky toy is excellent for studying traveling waves, a ball swinging on the end of a long string can be used to investigate pendulum motion, various masses attached to the end of a vertical spring or rubber band can be used to determine its elastic nature, an old pair of polarized sunglasses and some discarded lenses and a magnifying glass are the components of various experiments in optics, and an approximate measure of the free-fall acceleration can be determined simply by measuring with a stopwatch the time interval required for a ball to drop from a known height. The list of such experiments is endless. When physical models are not available, be imaginative and try to develop models of your own.

New Media

If available, we strongly encourage you to use the **Enhanced WebAssign** product that is available with this textbook. It is far easier to understand physics if you see it in action, and the materials available in Enhanced WebAssign will enable you to become a part of that action.


It is our sincere hope that you will find physics an exciting and enjoyable experience and that you will benefit from this experience, regardless of your chosen profession. Welcome to the exciting world of physics!

The scientist does not study nature because it is useful; he studies it because he delights in it, and he delights in it because it is beautiful. If nature were not beautiful, it would not be worth knowing, and if nature were not worth knowing, life would not be worth living.

—Henri Poincaré

The Honda FCX Clarity, a fuel-cell-powered automobile available to the public, albeit in limited quantities. A fuel cell converts hydrogen fuel into electricity to drive the motor attached to the wheels of the car. Automobiles, whether powered by fuel cells, gasoline engines, or batteries, use many of the concepts and principles of mechanics that we will study in this first part of the book. Quantities that we can use to describe the operation of vehicles include position, velocity, acceleration, force, energy, and momentum.

(PRNewsFoto/American Honda)



Physics, the most fundamental physical science, is concerned with the fundamental principles of the Universe. It is the foundation upon which the other sciences—astronomy, biology, chemistry, and geology—are based. It is also the basis of a large number of engineering applications. The beauty of physics lies in the simplicity of its fundamental principles and in the manner in which just a small number of concepts and models can alter and expand our view of the world around us.

The study of physics can be divided into six main areas:

1. *classical mechanics*, concerning the motion of objects that are large relative to atoms and move at speeds much slower than the speed of light
2. *relativity*, a theory describing objects moving at any speed, even speeds approaching the speed of light
3. *thermodynamics*, dealing with heat, work, temperature, and the statistical behavior of systems with large numbers of particles
4. *electromagnetism*, concerning electricity, magnetism, and electromagnetic fields
5. *optics*, the study of the behavior of light and its interaction with materials
6. *quantum mechanics*, a collection of theories connecting the behavior of matter at the submicroscopic level to macroscopic observations

The disciplines of mechanics and electromagnetism are basic to all other branches of classical physics (developed before 1900) and modern physics (c. 1900–present). The first part of this textbook deals with classical mechanics, sometimes referred to as *Newtonian mechanics* or simply *mechanics*. Many principles and models used to understand mechanical systems retain their importance in the theories of other areas of physics and can later be used to describe many natural phenomena. Therefore, classical mechanics is of vital importance to students from all disciplines. ■

Physics and Measurement

- 1.1 Standards of Length, Mass, and Time
- 1.2 Matter and Model Building
- 1.3 Dimensional Analysis
- 1.4 Conversion of Units
- 1.5 Estimates and Order-of-Magnitude Calculations
- 1.6 Significant Figures



Stonehenge, in southern England, was built thousands of years ago. Various theories have been proposed about its function, including a burial ground, a healing site, and a place for ancestor worship. One of the more intriguing theories suggests that Stonehenge was an observatory, allowing measurements of some of the quantities discussed in this chapter, such as position of objects in space and time intervals between repeating celestial events. *(Stephen Inglis/Shutterstock.com)*

Like all other sciences, physics is based on experimental observations and quantitative measurements. The main objectives of physics are to identify a limited number of fundamental laws that govern natural phenomena and use them to develop theories that can predict the results of future experiments. The fundamental laws used in developing theories are expressed in the language of mathematics, the tool that provides a bridge between theory and experiment.

When there is a discrepancy between the prediction of a theory and experimental results, new or modified theories must be formulated to remove the discrepancy. Many times a theory is satisfactory only under limited conditions; a more general theory might be satisfactory without such limitations. For example, the laws of motion discovered by Isaac Newton (1642–1727) accurately describe the motion of objects moving at normal speeds but do not apply to objects moving at speeds comparable to the speed of light. In contrast, the special theory of relativity developed later by Albert Einstein (1879–1955) gives the same results as Newton's laws at low speeds but also correctly describes the motion of objects at speeds approaching the speed of light. Hence, Einstein's special theory of relativity is a more general theory of motion than that formed from Newton's laws.

Classical physics includes the principles of classical mechanics, thermodynamics, optics, and electromagnetism developed before 1900. Important contributions to classical physics

ENHANCED
WebAssign Interactive content from this and other chapters may be assigned online in Enhanced WebAssign.

were provided by Newton, who was also one of the originators of calculus as a mathematical tool. Major developments in mechanics continued in the 18th century, but the fields of thermodynamics and electromagnetism were not developed until the latter part of the 19th century, principally because before that time the apparatus for controlled experiments in these disciplines was either too crude or unavailable.

A major revolution in physics, usually referred to as *modern physics*, began near the end of the 19th century. Modern physics developed mainly because many physical phenomena could not be explained by classical physics. The two most important developments in this modern era were the theories of relativity and quantum mechanics. Einstein's special theory of relativity not only correctly describes the motion of objects moving at speeds comparable to the speed of light; it also completely modifies the traditional concepts of space, time, and energy. The theory also shows that the speed of light is the upper limit of the speed of an object and that mass and energy are related. Quantum mechanics was formulated by a number of distinguished scientists to provide descriptions of physical phenomena at the atomic level. Many practical devices have been developed using the principles of quantum mechanics.

Scientists continually work at improving our understanding of fundamental laws. Numerous technological advances in recent times are the result of the efforts of many scientists, engineers, and technicians, such as unmanned planetary explorations, a variety of developments and potential applications in nanotechnology, microcircuitry and high-speed computers, sophisticated imaging techniques used in scientific research and medicine, and several remarkable results in genetic engineering. The effects of such developments and discoveries on our society have indeed been great, and it is very likely that future discoveries and developments will be exciting, challenging, and of great benefit to humanity.

1.1 Standards of Length, Mass, and Time

To describe natural phenomena, we must make measurements of various aspects of nature. Each measurement is associated with a physical quantity, such as the length of an object. The laws of physics are expressed as mathematical relationships among physical quantities that we will introduce and discuss throughout the book. In mechanics, the three fundamental quantities are length, mass, and time. All other quantities in mechanics can be expressed in terms of these three.

If we are to report the results of a measurement to someone who wishes to reproduce this measurement, a *standard* must be defined. It would be meaningless if a visitor from another planet were to talk to us about a length of 8 “glitches” if we do not know the meaning of the unit glitch. On the other hand, if someone familiar with our system of measurement reports that a wall is 2 meters high and our unit of length is defined to be 1 meter, we know that the height of the wall is twice our basic length unit. Whatever is chosen as a standard must be readily accessible and must possess some property that can be measured reliably. Measurement standards used by different people in different places—throughout the Universe—must yield the same result. In addition, standards used for measurements must not change with time.

In 1960, an international committee established a set of standards for the fundamental quantities of science. It is called the **SI** (Système International), and its fundamental units of length, mass, and time are the *meter*, *kilogram*, and *second*, respectively. Other standards for SI fundamental units established by the committee are those for temperature (the *kelvin*), electric current (the *ampere*), luminous intensity (the *candela*), and the amount of substance (the *mole*).

Length

We can identify **length** as the distance between two points in space. In 1120, the king of England decreed that the standard of length in his country would be named the *yard* and would be precisely equal to the distance from the tip of his nose to the end of his outstretched arm. Similarly, the original standard for the foot adopted by the French was the length of the royal foot of King Louis XIV. Neither of these standards is constant in time; when a new king took the throne, length measurements changed! The French standard prevailed until 1799, when the legal standard of length in France became the **meter** (m), defined as one ten-millionth of the distance from the equator to the North Pole along one particular longitudinal line that passes through Paris. Notice that this value is an Earth-based standard that does not satisfy the requirement that it can be used throughout the Universe.

As recently as 1960, the length of the meter was defined as the distance between two lines on a specific platinum–iridium bar stored under controlled conditions in France. Current requirements of science and technology, however, necessitate more accuracy than that with which the separation between the lines on the bar can be determined. In the 1960s and 1970s, the meter was defined as 1 650 763.73 wavelengths¹ of orange-red light emitted from a krypton-86 lamp. In October 1983, however, the meter was redefined as **the distance traveled by light in vacuum during a time of 1/299 792 458 second**. In effect, this latest definition establishes that the speed of light in vacuum is precisely 299 792 458 meters per second. This definition of the meter is valid throughout the Universe based on our assumption that light is the same everywhere.

Table 1.1 lists approximate values of some measured lengths. You should study this table as well as the next two tables and begin to generate an intuition for what is meant by, for example, a length of 20 centimeters, a mass of 100 kilograms, or a time interval of 3.2×10^7 seconds.

Mass

The SI fundamental unit of **mass**, the **kilogram** (kg), is defined as **the mass of a specific platinum–iridium alloy cylinder kept at the International Bureau of Weights and Measures at Sèvres, France**. This mass standard was established in 1887 and

Table 1.1 Approximate Values of Some Measured Lengths

	Length (m)
Distance from the Earth to the most remote known quasar	1.4×10^{26}
Distance from the Earth to the most remote normal galaxies	9×10^{25}
Distance from the Earth to the nearest large galaxy (Andromeda)	2×10^{22}
Distance from the Sun to the nearest star (Proxima Centauri)	4×10^{16}
One light-year	9.46×10^{15}
Mean orbit radius of the Earth about the Sun	1.50×10^{11}
Mean distance from the Earth to the Moon	3.84×10^8
Distance from the equator to the North Pole	1.00×10^7
Mean radius of the Earth	6.37×10^6
Typical altitude (above the surface) of a satellite orbiting the Earth	2×10^5
Length of a football field	9.1×10^1
Length of a housefly	5×10^{-3}
Size of smallest dust particles	$\sim 10^{-4}$
Size of cells of most living organisms	$\sim 10^{-5}$
Diameter of a hydrogen atom	$\sim 10^{-10}$
Diameter of an atomic nucleus	$\sim 10^{-14}$
Diameter of a proton	$\sim 10^{-15}$

¹We will use the standard international notation for numbers with more than three digits, in which groups of three digits are separated by spaces rather than commas. Therefore, 10 000 is the same as the common American notation of 10,000. Similarly, $\pi = 3.14159265$ is written as 3.141 592 65.

Pitfall Prevention 1.1

Reasonable Values Generating intuition about typical values of quantities when solving problems is important because you must think about your end result and determine if it seems reasonable. For example, if you are calculating the mass of a housefly and arrive at a value of 100 kg, this answer is *unreasonable* and there is an error somewhere.

Table 1.2

Approximate Masses of Various Objects

	Mass (kg)
Observable Universe	$\sim 10^{52}$
Milky Way galaxy	$\sim 10^{42}$
Sun	1.99×10^{30}
Earth	5.98×10^{24}
Moon	7.36×10^{22}
Shark	$\sim 10^3$
Human	$\sim 10^2$
Frog	$\sim 10^{-1}$
Mosquito	$\sim 10^{-5}$
Bacterium	$\sim 1 \times 10^{-15}$
Hydrogen atom	1.67×10^{-27}
Electron	9.11×10^{-31}

Table 1.3 Approximate Values of Some Time Intervals

	Time Interval (s)
Age of the Universe	4×10^{17}
Age of the Earth	1.3×10^{17}
Average age of a college student	6.3×10^8
One year	3.2×10^7
One day	8.6×10^4
One class period	3.0×10^3
Time interval between normal heartbeats	8×10^{-1}
Period of audible sound waves	$\sim 10^{-3}$
Period of typical radio waves	$\sim 10^{-6}$
Period of vibration of an atom in a solid	$\sim 10^{-13}$
Period of visible light waves	$\sim 10^{-15}$
Duration of a nuclear collision	$\sim 10^{-22}$
Time interval for light to cross a proton	$\sim 10^{-24}$

has not been changed since that time because platinum–iridium is an unusually stable alloy. A duplicate of the Sèvres cylinder is kept at the National Institute of Standards and Technology (NIST) in Gaithersburg, Maryland (Fig. 1.1a). Table 1.2 lists approximate values of the masses of various objects.

Time

Before 1967, the standard of **time** was defined in terms of the *mean solar day*. (A solar day is the time interval between successive appearances of the Sun at the highest point it reaches in the sky each day.) The fundamental unit of a **second** (s) was defined as $(\frac{1}{60})(\frac{1}{60})(\frac{1}{24})$ of a mean solar day. This definition is based on the rotation of one planet, the Earth. Therefore, this motion does not provide a time standard that is universal.

In 1967, the second was redefined to take advantage of the high precision attainable in a device known as an *atomic clock* (Fig. 1.1b), which measures vibrations of cesium atoms. One second is now defined as **9 192 631 770 times the period of vibration of radiation from the cesium-133 atom**.² Approximate values of time intervals are presented in Table 1.3.

In addition to SI, another system of units, the *U.S. customary system*, is still used in the United States despite acceptance of SI by the rest of the world. In this system, the units of length, mass, and time are the foot (ft), slug, and second, respectively. In this book, we shall use SI units because they are almost universally accepted in science and industry. We shall make some limited use of U.S. customary units in the study of classical mechanics.

In addition to the fundamental SI units of meter, kilogram, and second, we can also use other units, such as millimeters and nanoseconds, where the prefixes *milli-* and *nano-* denote multipliers of the basic units based on various powers of ten. Prefixes for the various powers of ten and their abbreviations are listed in Table 1.4 (page 6). For example, 10^{-3} m is equivalent to 1 millimeter (mm), and 10^3 m corresponds to 1 kilometer (km). Likewise, 1 kilogram (kg) is 10^3 grams (g), and 1 megavolt (MV) is 10^6 volts (V).

The variables length, time, and mass are examples of *fundamental quantities*. Most other variables are *derived quantities*, those that can be expressed as a mathematical combination of fundamental quantities. Common examples are *area* (a product of two lengths) and *speed* (a ratio of a length to a time interval).

Reproduced with permission of the BIPM, which retains full internationally protected copyright.



a



AP Photo/Focke Strangmann

b

Figure 1.1 (a) The National Standard Kilogram No. 20, an accurate copy of the International Standard Kilogram kept at Sèvres, France, is housed under a double bell jar in a vault at the National Institute of Standards and Technology. (b) A cesium fountain atomic clock. The clock will neither gain nor lose a second in 20 million years.

²Period is defined as the time interval needed for one complete vibration.

Table 1.4 Prefixes for Powers of Ten

Power	Prefix	Abbreviation	Power	Prefix	Abbreviation
10^{-24}	yocto	y	10^3	kilo	k
10^{-21}	zepto	z	10^6	mega	M
10^{-18}	atto	a	10^9	giga	G
10^{-15}	femto	f	10^{12}	tera	T
10^{-12}	pico	p	10^{15}	peta	P
10^{-9}	nano	n	10^{18}	exa	E
10^{-6}	micro	μ	10^{21}	zetta	Z
10^{-3}	milli	m	10^{24}	yotta	Y
10^{-2}	centi	c			
10^{-1}	deci	d			

A table of the letters in the Greek alphabet is provided on the back endpaper of this book.

Another example of a derived quantity is **density**. The density ρ (Greek letter rho) of any substance is defined as its *mass per unit volume*:

$$\rho \equiv \frac{m}{V} \quad (1.1)$$

In terms of fundamental quantities, density is a ratio of a mass to a product of three lengths. Aluminum, for example, has a density of $2.70 \times 10^3 \text{ kg/m}^3$, and iron has a density of $7.86 \times 10^3 \text{ kg/m}^3$. An extreme difference in density can be imagined by thinking about holding a 10-centimeter (cm) cube of Styrofoam in one hand and a 10-cm cube of lead in the other. See Table 14.1 in Chapter 14 for densities of several materials.

Quick Quiz 1.1 In a machine shop, two cams are produced, one of aluminum and one of iron. Both cams have the same mass. Which cam is larger? (a) The aluminum cam is larger. (b) The iron cam is larger. (c) Both cams have the same size.

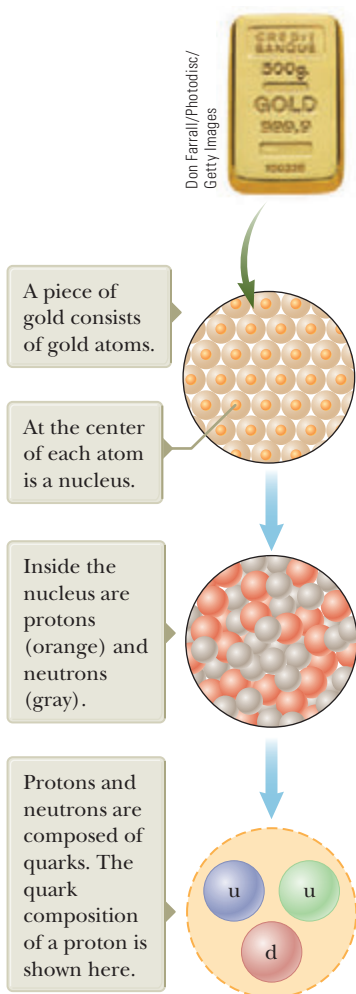


Figure 1.2 Levels of organization in matter.

1.2 Matter and Model Building

If physicists cannot interact with some phenomenon directly, they often imagine a **model** for a physical system that is related to the phenomenon. For example, we cannot interact directly with atoms because they are too small. Therefore, we build a mental model of an atom based on a system of a nucleus and one or more electrons outside the nucleus. Once we have identified the physical components of the model, we make predictions about its behavior based on the interactions among the components of the system or the interaction between the system and the environment outside the system.

As an example, consider the behavior of *matter*. A sample of solid gold is shown at the top of Figure 1.2. Is this sample nothing but wall-to-wall gold, with no empty space? If the sample is cut in half, the two pieces still retain their chemical identity as solid gold. What if the pieces are cut again and again, indefinitely? Will the smaller and smaller pieces always be gold? Such questions can be traced to early Greek philosophers. Two of them—Leucippus and his student Democritus—could not accept the idea that such cuttings could go on forever. They developed a model for matter by speculating that the process ultimately must end when it produces a particle that can no longer be cut. In Greek, *atomos* means “not sliceable.” From this Greek term comes our English word *atom*.

The Greek model of the structure of matter was that all ordinary matter consists of atoms, as suggested in the middle of Figure 1.2. Beyond that, no additional structure was specified in the model; atoms acted as small particles that interacted with one another, but internal structure of the atom was not a part of the model.

In 1897, J. J. Thomson identified the electron as a charged particle and as a constituent of the atom. This led to the first atomic model that contained internal structure. We shall discuss this model in Chapter 42.

Following the discovery of the nucleus in 1911, an atomic model was developed in which each atom is made up of electrons surrounding a central nucleus. A nucleus of gold is shown in Figure 1.2. This model leads, however, to a new question: Does the nucleus have structure? That is, is the nucleus a single particle or a collection of particles? By the early 1930s, a model evolved that described two basic entities in the nucleus: protons and neutrons. The proton carries a positive electric charge, and a specific chemical element is identified by the number of protons in its nucleus. This number is called the **atomic number** of the element. For instance, the nucleus of a hydrogen atom contains one proton (so the atomic number of hydrogen is 1), the nucleus of a helium atom contains two protons (atomic number 2), and the nucleus of a uranium atom contains 92 protons (atomic number 92). In addition to atomic number, a second number—**mass number**, defined as the number of protons plus neutrons in a nucleus—characterizes atoms. The atomic number of a specific element never varies (i.e., the number of protons does not vary), but the mass number can vary (i.e., the number of neutrons varies).

Is that, however, where the process of breaking down stops? Protons, neutrons, and a host of other exotic particles are now known to be composed of six different varieties of particles called **quarks**, which have been given the names of *up*, *down*, *strange*, *charmed*, *bottom*, and *top*. The up, charmed, and top quarks have electric charges of $+\frac{2}{3}$ that of the proton, whereas the down, strange, and bottom quarks have charges of $-\frac{1}{3}$ that of the proton. The proton consists of two up quarks and one down quark as shown at the bottom of Figure 1.2 and labeled u and d. This structure predicts the correct charge for the proton. Likewise, the neutron consists of two down quarks and one up quark, giving a net charge of zero.

You should develop a process of building models as you study physics. In this study, you will be challenged with many mathematical problems to solve. One of the most important problem-solving techniques is to build a model for the problem: identify a system of physical components for the problem and make predictions of the behavior of the system based on the interactions among its components or the interaction between the system and its surrounding environment.

1.3 Dimensional Analysis

In physics, the word *dimension* denotes the physical nature of a quantity. The distance between two points, for example, can be measured in feet, meters, or furlongs, which are all different ways of expressing the dimension of length.

The symbols we use in this book to specify the dimensions of length, mass, and time are L, M, and T, respectively.³ We shall often use brackets [] to denote the dimensions of a physical quantity. For example, the symbol we use for speed in this book is v , and in our notation, the dimensions of speed are written $[v] = L/T$. As another example, the dimensions of area A are $[A] = L^2$. The dimensions and units of area, volume, speed, and acceleration are listed in Table 1.5. The dimensions of other quantities, such as force and energy, will be described as they are introduced in the text.

Table 1.5 Dimensions and Units of Four Derived Quantities

Quantity	Area (A)	Volume (V)	Speed (v)	Acceleration (a)
Dimensions	L^2	L^3	L/T	L/T^2
SI units	m^2	m^3	m/s	m/s^2
U.S. customary units	ft^2	ft^3	ft/s	ft/s^2

³The *dimensions* of a quantity will be symbolized by a capitalized, nonitalic letter such as L or T. The *algebraic symbol* for the quantity itself will be an italicized letter such as L for the length of an object or t for time.

In many situations, you may have to check a specific equation to see if it matches your expectations. A useful procedure for doing that, called **dimensional analysis**, can be used because dimensions can be treated as algebraic quantities. For example, quantities can be added or subtracted only if they have the same dimensions. Furthermore, the terms on both sides of an equation must have the same dimensions. By following these simple rules, you can use dimensional analysis to determine whether an expression has the correct form. Any relationship can be correct only if the dimensions on both sides of the equation are the same.

To illustrate this procedure, suppose you are interested in an equation for the position x of a car at a time t if the car starts from rest at $x = 0$ and moves with constant acceleration a . The correct expression for this situation is $x = \frac{1}{2}at^2$ as we show in Chapter 2. The quantity x on the left side has the dimension of length. For the equation to be dimensionally correct, the quantity on the right side must also have the dimension of length. We can perform a dimensional check by substituting the dimensions for acceleration, L/T^2 (Table 1.5), and time, T , into the equation. That is, the dimensional form of the equation $x = \frac{1}{2}at^2$ is

$$L = \frac{L}{T^2} \cdot T^2 = L$$

The dimensions of time cancel as shown, leaving the dimension of length on the right-hand side to match that on the left.

A more general procedure using dimensional analysis is to set up an expression of the form

$$x \propto a^n t^m$$

where n and m are exponents that must be determined and the symbol \propto indicates a proportionality. This relationship is correct only if the dimensions of both sides are the same. Because the dimension of the left side is length, the dimension of the right side must also be length. That is,

$$[a^n t^m] = L = L^1 T^0$$

Because the dimensions of acceleration are L/T^2 and the dimension of time is T , we have

$$(L/T^2)^n T^m = L^1 T^0 \quad \rightarrow \quad (L^n T^{m-2n}) = L^1 T^0$$

The exponents of L and T must be the same on both sides of the equation. From the exponents of L , we see immediately that $n = 1$. From the exponents of T , we see that $m - 2n = 0$, which, once we substitute for n , gives us $m = 2$. Returning to our original expression $x \propto a^n t^m$, we conclude that $x \propto at^2$.

- Quick Quiz 1.2** True or False: Dimensional analysis can give you the numerical value of constants of proportionality that may appear in an algebraic expression.

Pitfall Prevention 1.2

Symbols for Quantities Some quantities have a small number of symbols that represent them. For example, the symbol for time is almost always t . Other quantities might have various symbols depending on the usage. Length may be described with symbols such as x , y , and z (for position); r (for radius); a , b , and c (for the legs of a right triangle); ℓ (for the length of an object); d (for a distance); h (for a height); and so forth.

Example 1.1 Analysis of an Equation

Show that the expression $v = at$, where v represents speed, a acceleration, and t an instant of time, is dimensionally correct.

SOLUTION

Identify the dimensions of v from Table 1.5:

$$[v] = \frac{L}{T}$$

▶ 1.1 continued

Identify the dimensions of a from Table 1.5 and multiply by the dimensions of t :

$$[at] = \frac{\text{L}}{\text{T}^2} \mathcal{T} = \frac{\text{L}}{\text{T}}$$

Therefore, $v = at$ is dimensionally correct because we have the same dimensions on both sides. (If the expression were given as $v = at^2$, it would be dimensionally *incorrect*. Try it and see!)

Example 1.2 Analysis of a Power Law

Suppose we are told that the acceleration a of a particle moving with uniform speed v in a circle of radius r is proportional to some power of r , say r^n , and some power of v , say v^m . Determine the values of n and m and write the simplest form of an equation for the acceleration.

SOLUTION

Write an expression for a with a dimensionless constant of proportionality k :

$$a = kr^n v^m$$

Substitute the dimensions of a , r , and v :

$$\frac{\text{L}}{\text{T}^2} = \text{L}^n \left(\frac{\text{L}}{\text{T}} \right)^m = \frac{\text{L}^{n+m}}{\text{T}^m}$$

Equate the exponents of L and T so that the dimensional equation is balanced:

$$n + m = 1 \text{ and } m = 2$$

Solve the two equations for n :

$$n = -1$$

Write the acceleration expression:

$$a = kr^{-1} v^2 = k \frac{v^2}{r}$$

In Section 4.4 on uniform circular motion, we show that $k = 1$ if a consistent set of units is used. The constant k would not equal 1 if, for example, v were in km/h and you wanted a in m/s^2 .

1.4 Conversion of Units

Sometimes it is necessary to convert units from one measurement system to another or convert within a system (for example, from kilometers to meters). Conversion factors between SI and U.S. customary units of length are as follows:

$$\begin{aligned} 1 \text{ mile} &= 1\,609 \text{ m} = 1.609 \text{ km} & 1 \text{ ft} &= 0.3048 \text{ m} = 30.48 \text{ cm} \\ 1 \text{ m} &= 39.37 \text{ in.} = 3.281 \text{ ft} & 1 \text{ in.} &= 0.0254 \text{ m} = 2.54 \text{ cm (exactly)} \end{aligned}$$

A more complete list of conversion factors can be found in Appendix A.

Like dimensions, units can be treated as algebraic quantities that can cancel each other. For example, suppose we wish to convert 15.0 in. to centimeters. Because 1 in. is defined as exactly 2.54 cm, we find that

$$15.0 \text{ in.} = (15.0 \text{ in.}) \left(\frac{2.54 \text{ cm}}{1 \text{ in.}} \right) = 38.1 \text{ cm}$$

where the ratio in parentheses is equal to 1. We express 1 as 2.54 cm/1 in. (rather than 1 in./2.54 cm) so that the unit “inch” in the denominator cancels with the unit in the original quantity. The remaining unit is the centimeter, our desired result.

Pitfall Prevention 1.3

Always Include Units When performing calculations with numerical values, include the units for every quantity and carry the units through the entire calculation. Avoid the temptation to drop the units early and then attach the expected units once you have an answer. By including the units in every step, you can detect errors if the units for the answer turn out to be incorrect.

- Quick Quiz 1.3** The distance between two cities is 100 mi. What is the number of kilometers between the two cities? (a) smaller than 100 (b) larger than 100 (c) equal to 100

Example 1.3 Is He Speeding?

On an interstate highway in a rural region of Wyoming, a car is traveling at a speed of 38.0 m/s. Is the driver exceeding the speed limit of 75.0 mi/h?

SOLUTION

Convert meters in the speed to miles:

$$(38.0 \text{ m/s}) \left(\frac{1 \text{ mi}}{1609 \text{ m}} \right) = 2.36 \times 10^{-2} \text{ mi/s}$$

Convert seconds to hours:

$$(2.36 \times 10^{-2} \text{ mi/s}) \left(\frac{60 \text{ s}}{1 \text{ min}} \right) \left(\frac{60 \text{ min}}{1 \text{ h}} \right) = 85.0 \text{ mi/h}$$

The driver is indeed exceeding the speed limit and should slow down.

WHAT IF? What if the driver were from outside the United States and is familiar with speeds measured in kilometers per hour? What is the speed of the car in km/h?

Answer We can convert our final answer to the appropriate units:

$$(85.0 \text{ mi/h}) \left(\frac{1.609 \text{ km}}{1 \text{ mi}} \right) = 137 \text{ km/h}$$

Figure 1.3 shows an automobile speedometer displaying speeds in both mi/h and km/h. Can you check the conversion we just performed using this photograph?



© Cengage Learning/Ed Dodd

Figure 1.3 The speedometer of a vehicle that shows speeds in both miles per hour and kilometers per hour.

1.5 Estimates and Order-of-Magnitude Calculations

Suppose someone asks you the number of bits of data on a typical musical compact disc. In response, it is not generally expected that you would provide the exact number but rather an estimate, which may be expressed in scientific notation. The estimate may be made even more approximate by expressing it as an *order of magnitude*, which is a power of ten determined as follows:

1. Express the number in scientific notation, with the multiplier of the power of ten between 1 and 10 and a unit.
2. If the multiplier is less than 3.162 (the square root of 10), the order of magnitude of the number is the power of 10 in the scientific notation. If the multiplier is greater than 3.162, the order of magnitude is one larger than the power of 10 in the scientific notation.

We use the symbol \sim for “is on the order of.” Use the procedure above to verify the orders of magnitude for the following lengths:

$$0.0086 \text{ m} \sim 10^{-2} \text{ m} \quad 0.0021 \text{ m} \sim 10^{-3} \text{ m} \quad 720 \text{ m} \sim 10^3 \text{ m}$$

Usually, when an order-of-magnitude estimate is made, the results are reliable to within about a factor of 10. If a quantity increases in value by three orders of magnitude, its value increases by a factor of about $10^3 = 1\,000$.

Inaccuracies caused by guessing too low for one number are often canceled by other guesses that are too high. You will find that with practice your guesstimates become better and better. Estimation problems can be fun to work because you freely drop digits, venture reasonable approximations for unknown numbers, make simplifying assumptions, and turn the question around into something you can answer in your head or with minimal mathematical manipulation on paper. Because of the simplicity of these types of calculations, they can be performed on a *small* scrap of paper and are often called “back-of-the-envelope calculations.”

Example 1.4 Breaths in a Lifetime

Estimate the number of breaths taken during an average human lifetime.

SOLUTION

We start by guessing that the typical human lifetime is about 70 years. Think about the average number of breaths that a person takes in 1 min. This number varies depending on whether the person is exercising, sleeping, angry, serene, and so forth. To the nearest order of magnitude, we shall choose 10 breaths per minute as our estimate. (This estimate is certainly closer to the true average value than an estimate of 1 breath per minute or 100 breaths per minute.)

Find the approximate number of minutes in a year: $1 \text{ yr} \left(\frac{400 \text{ days}}{1 \text{ yr}} \right) \left(\frac{25 \text{ h}}{1 \text{ day}} \right) \left(\frac{60 \text{ min}}{1 \text{ h}} \right) = 6 \times 10^5 \text{ min}$

Find the approximate number of minutes in a 70-year lifetime: $\text{number of minutes} = (70 \text{ yr})(6 \times 10^5 \text{ min/yr}) = 4 \times 10^7 \text{ min}$

Find the approximate number of breaths in a lifetime: $\text{number of breaths} = (10 \text{ breaths/min})(4 \times 10^7 \text{ min}) = 4 \times 10^8 \text{ breaths}$

Therefore, a person takes on the order of 10^9 breaths in a lifetime. Notice how much simpler it is in the first calculation above to multiply 400×25 than it is to work with the more accurate 365×24 .

WHAT IF? What if the average lifetime were estimated as 80 years instead of 70? Would that change our final estimate?

Answer We could claim that $(80 \text{ yr})(6 \times 10^5 \text{ min/yr}) = 5 \times 10^7 \text{ min}$, so our final estimate should be 5×10^8 breaths. This answer is still on the order of 10^9 breaths, so an order-of-magnitude estimate would be unchanged.

1.6 Significant Figures

When certain quantities are measured, the measured values are known only to within the limits of the experimental uncertainty. The value of this uncertainty can depend on various factors, such as the quality of the apparatus, the skill of the experimenter, and the number of measurements performed. The number of **significant figures** in a measurement can be used to express something about the uncertainty. The number of significant figures is related to the number of numerical digits used to express the measurement, as we discuss below.

As an example of significant figures, suppose we are asked to measure the radius of a compact disc using a meterstick as a measuring instrument. Let us assume the accuracy to which we can measure the radius of the disc is ± 0.1 cm. Because of the uncertainty of ± 0.1 cm, if the radius is measured to be 6.0 cm, we can claim only that its radius lies somewhere between 5.9 cm and 6.1 cm. In this case, we say that the measured value of 6.0 cm has two significant figures. Note that *the*

significant figures include the first estimated digit. Therefore, we could write the radius as (6.0 ± 0.1) cm.

Zeros may or may not be significant figures. Those used to position the decimal point in such numbers as 0.03 and 0.007 5 are not significant. Therefore, there are one and two significant figures, respectively, in these two values. When the zeros come after other digits, however, there is the possibility of misinterpretation. For example, suppose the mass of an object is given as 1 500 g. This value is ambiguous because we do not know whether the last two zeros are being used to locate the decimal point or whether they represent significant figures in the measurement. To remove this ambiguity, it is common to use scientific notation to indicate the number of significant figures. In this case, we would express the mass as 1.5×10^3 g if there are two significant figures in the measured value, 1.50×10^3 g if there are three significant figures, and 1.500×10^3 g if there are four. The same rule holds for numbers less than 1, so 2.3×10^{-4} has two significant figures (and therefore could be written 0.000 23) and 2.30×10^{-4} has three significant figures (also written as 0.000 230).

In problem solving, we often combine quantities mathematically through multiplication, division, addition, subtraction, and so forth. When doing so, you must make sure that the result has the appropriate number of significant figures. A good rule of thumb to use in determining the number of significant figures that can be claimed in a multiplication or a division is as follows:

When multiplying several quantities, the number of significant figures in the final answer is the same as the number of significant figures in the quantity having the smallest number of significant figures. The same rule applies to division.

Let's apply this rule to find the area of the compact disc whose radius we measured above. Using the equation for the area of a circle,

$$A = \pi r^2 = \pi(6.0 \text{ cm})^2 = 1.1 \times 10^2 \text{ cm}^2$$

If you perform this calculation on your calculator, you will likely see 113.097 335 5. It should be clear that you don't want to keep all of these digits, but you might be tempted to report the result as 113 cm². This result is not justified because it has three significant figures, whereas the radius only has two. Therefore, we must report the result with only two significant figures as shown above.

For addition and subtraction, you must consider the number of decimal places when you are determining how many significant figures to report:

When numbers are added or subtracted, the number of decimal places in the result should equal the smallest number of decimal places of any term in the sum or difference.

As an example of this rule, consider the sum

$$23.2 + 5.174 = 28.4$$

Notice that we do not report the answer as 28.374 because the lowest number of decimal places is one, for 23.2. Therefore, our answer must have only one decimal place.

The rule for addition and subtraction can often result in answers that have a different number of significant figures than the quantities with which you start. For example, consider these operations that satisfy the rule:

$$1.000 1 + 0.000 3 = 1.000 4$$

$$1.002 - 0.998 = 0.004$$

In the first example, the result has five significant figures even though one of the terms, 0.000 3, has only one significant figure. Similarly, in the second calculation, the result has only one significant figure even though the numbers being subtracted have four and three, respectively.

Pitfall Prevention 1.4

Read Carefully Notice that the rule for addition and subtraction is different from that for multiplication and division. For addition and subtraction, the important consideration is the number of *decimal places*, not the number of *significant figures*.

In this book, most of the numerical examples and end-of-chapter problems will yield answers having three significant figures. When carrying out estimation calculations, we shall typically work with a single significant figure.

If the number of significant figures in the result of a calculation must be reduced, there is a general rule for rounding numbers: the last digit retained is increased by 1 if the last digit dropped is greater than 5. (For example, 1.346 becomes 1.35.) If the last digit dropped is less than 5, the last digit retained remains as it is. (For example, 1.343 becomes 1.34.) If the last digit dropped is equal to 5, the remaining digit should be rounded to the nearest even number. (This rule helps avoid accumulation of errors in long arithmetic processes.)

A technique for avoiding error accumulation is to delay the rounding of numbers in a long calculation until you have the final result. Wait until you are ready to copy the final answer from your calculator before rounding to the correct number of significant figures. In this book, we display numerical values rounded off to two or three significant figures. This occasionally makes some mathematical manipulations look odd or incorrect. For instance, looking ahead to Example 3.5 on page 69, you will see the operation $-17.7 \text{ km} + 34.6 \text{ km} = 17.0 \text{ km}$. This looks like an incorrect subtraction, but that is only because we have rounded the numbers 17.7 km and 34.6 km for display. If all digits in these two intermediate numbers are retained and the rounding is only performed on the final number, the correct three-digit result of 17.0 km is obtained.

Example 1.5 Installing a Carpet

A carpet is to be installed in a rectangular room whose length is measured to be 12.71 m and whose width is measured to be 3.46 m. Find the area of the room.

SOLUTION

If you multiply 12.71 m by 3.46 m on your calculator, you will see an answer of 43.9766 m². How many of these numbers should you claim? Our rule of thumb for multiplication tells us that you can claim only the number of significant figures in your answer as are present in the measured quantity having the lowest number of significant figures. In this example, the lowest number of significant figures is three in 3.46 m, so we should express our final answer as 44.0 m².

Significant figure guidelines used in this book

Pitfall Prevention 1.5

Symbolic Solutions When solving problems, it is very useful to perform the solution completely in algebraic form and wait until the very end to enter numerical values into the final symbolic expression. This method will save many calculator keystrokes, especially if some quantities cancel so that you never have to enter their values into your calculator! In addition, you will only need to round once, on the final result.

Summary

Definitions

The three fundamental physical quantities of mechanics are **length**, **mass**, and **time**, which in the SI system have the units **meter** (m), **kilogram** (kg), and **second** (s), respectively. These fundamental quantities cannot be defined in terms of more basic quantities.

The **density** of a substance is defined as its *mass per unit volume*:

$$\rho \equiv \frac{m}{V} \quad (1.1)$$

continued

Concepts and Principles

The method of **dimensional analysis** is very powerful in solving physics problems. Dimensions can be treated as algebraic quantities. By making estimates and performing order-of-magnitude calculations, you should be able to approximate the answer to a problem when there is not enough information available to specify an exact solution completely.

When you compute a result from several measured numbers, each of which has a certain accuracy, you should give the result with the correct number of **significant figures**.

When **multiplying** several quantities, the number of significant figures in the final answer is the same as the number of significant figures in the quantity having the smallest number of significant figures. The same rule applies to **division**.

When numbers are **added** or **subtracted**, the number of decimal places in the result should equal the smallest number of decimal places of any term in the sum or difference.

Objective Questions

1. denotes answer available in *Student Solutions Manual/Study Guide*

- One student uses a meterstick to measure the thickness of a textbook and obtains $4.3 \text{ cm} \pm 0.1 \text{ cm}$. Other students measure the thickness with vernier calipers and obtain four different measurements: (a) $4.32 \text{ cm} \pm 0.01 \text{ cm}$, (b) $4.31 \text{ cm} \pm 0.01 \text{ cm}$, (c) $4.24 \text{ cm} \pm 0.01 \text{ cm}$, and (d) $4.43 \text{ cm} \pm 0.01 \text{ cm}$. Which of these four measurements, if any, agree with that obtained by the first student?
- A house is advertised as having 1 420 square feet under its roof. What is its area in square meters? (a) $4\,660 \text{ m}^2$ (b) 432 m^2 (c) 158 m^2 (d) 132 m^2 (e) 40.2 m^2
- Answer each question yes or no. Must two quantities have the same dimensions (a) if you are adding them? (b) If you are multiplying them? (c) If you are subtracting them? (d) If you are dividing them? (e) If you are equating them?
- The price of gasoline at a particular station is 1.5 euros per liter. An American student can use 33 euros to buy gasoline. Knowing that 4 quarts make a gallon and that 1 liter is close to 1 quart, she quickly reasons that she can buy how many gallons of gasoline? (a) less than 1 gallon (b) about 5 gallons (c) about 8 gallons (d) more than 10 gallons
- Rank the following five quantities in order from the largest to the smallest. If two of the quantities are equal, give them equal rank in your list. (a) 0.032 kg (b) 15 g (c) $2.7 \times 10^5 \text{ mg}$ (d) $4.1 \times 10^{-8} \text{ Gg}$ (e) $2.7 \times 10^8 \mu\text{g}$
- What is the sum of the measured values $21.4 \text{ s} + 15 \text{ s} + 17.17 \text{ s} + 4.00 \text{ s}$? (a) 57.573 s (b) 57.57 s (c) 57.6 s (d) 58 s (e) 60 s
- Which of the following is the best estimate for the mass of all the people living on the Earth? (a) $2 \times 10^8 \text{ kg}$ (b) $1 \times 10^9 \text{ kg}$ (c) $2 \times 10^{10} \text{ kg}$ (d) $3 \times 10^{11} \text{ kg}$ (e) $4 \times 10^{12} \text{ kg}$
- (a) If an equation is dimensionally correct, does that mean that the equation must be true? (b) If an equation is not dimensionally correct, does that mean that the equation cannot be true?
- Newton's second law of motion (Chapter 5) says that the mass of an object times its acceleration is equal to the net force on the object. Which of the following gives the correct units for force? (a) $\text{kg} \cdot \text{m}/\text{s}^2$ (b) $\text{kg} \cdot \text{m}^2/\text{s}^2$ (c) $\text{kg}/\text{m} \cdot \text{s}^2$ (d) $\text{kg} \cdot \text{m}^2/\text{s}$ (e) none of those answers
- A calculator displays a result as $1.365\,248\,0 \times 10^7 \text{ kg}$. The estimated uncertainty in the result is $\pm 2\%$. How many digits should be included as significant when the result is written down? (a) zero (b) one (c) two (d) three (e) four

Conceptual Questions

1. denotes answer available in *Student Solutions Manual/Study Guide*

- Suppose the three fundamental standards of the metric system were length, *density*, and time rather than length, *mass*, and time. The standard of density in this system is to be defined as that of water. What considerations about water would you need to address to make sure that the standard of density is as accurate as possible?
- Why is the metric system of units considered superior to most other systems of units?
- What natural phenomena could serve as alternative time standards?
- Express the following quantities using the prefixes given in Table 1.4. (a) $3 \times 10^{-4} \text{ m}$ (b) $5 \times 10^{-5} \text{ s}$ (c) $72 \times 10^2 \text{ g}$

Problems

WebAssign The problems found in this chapter may be assigned online in Enhanced WebAssign

1. straightforward; 2. intermediate; 3. challenging

1. full solution available in the *Student Solutions Manual/Study Guide*

AMT Analysis Model tutorial available in Enhanced WebAssign

GP Guided Problem

M Master It tutorial available in Enhanced WebAssign

W Watch It video solution available in Enhanced WebAssign

Section 1.1 Standards of Length, Mass, and Time

Note: Consult the endpapers, appendices, and tables in the text whenever necessary in solving problems. For this chapter, Table 14.1 and Appendix B.3 may be particularly useful. Answers to odd-numbered problems appear in the back of the book.

- (a) Use information on the endpapers of this book to calculate the average density of the Earth. (b) Where does the value fit among those listed in Table 14.1 in Chapter 14? Look up the density of a typical surface rock like granite in another source and compare it with the density of the Earth.
- The standard kilogram (Fig. 1.1a) is a platinum–iridium cylinder 39.0 mm in height and 39.0 mm in diameter. What is the density of the material?
- An automobile company displays a die-cast model of its first car, made from 9.35 kg of iron. To celebrate its hundredth year in business, a worker will recast the model in solid gold from the original dies. What mass of gold is needed to make the new model?
- A proton, which is the nucleus of a hydrogen atom, can be modeled as a sphere with a diameter of 2.4 fm and a mass of 1.67×10^{-27} kg. (a) Determine the density of the proton. (b) State how your answer to part (a) compares with the density of osmium, given in Table 14.1 in Chapter 14.
- Two spheres are cut from a certain uniform rock. One has radius 4.50 cm. The mass of the other is five times greater. Find its radius.
- What mass of a material with density ρ is required to make a hollow spherical shell having inner radius r_1 and outer radius r_2 ?

Section 1.2 Matter and Model Building

- A crystalline solid consists of atoms stacked up in a repeating lattice structure. Consider a crystal as shown in Figure P1.7a. The atoms reside at the corners of cubes of side $L = 0.200$ nm. One piece of evidence for the regular arrangement of atoms comes from the flat surfaces along which a crystal separates, or cleaves, when it is broken. Suppose this crystal cleaves along a face diagonal as shown in Figure P1.7b. Calculate the spacing d between two adjacent atomic planes that separate when the crystal cleaves.

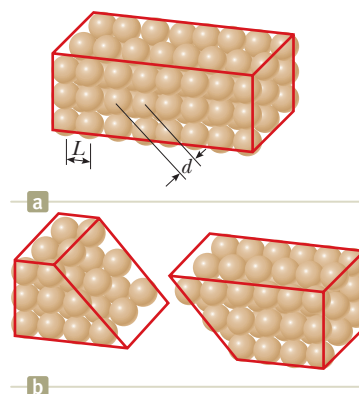


Figure P1.7

- The mass of a copper atom is 1.06×10^{-25} kg, and the density of copper is $8\,920$ kg/m³. (a) Determine the number of atoms in 1 cm³ of copper. (b) Visualize the one cubic centimeter as formed by stacking up identical cubes, with one copper atom at the center of each. Determine the volume of each cube. (c) Find the edge dimension of each cube, which represents an estimate for the spacing between atoms.

Section 1.3 Dimensional Analysis

- Which of the following equations are dimensionally correct? (a) $v_f = v_i + ax$ (b) $y = (2 \text{ m}) \cos(kx)$, where $k = 2 \text{ m}^{-1}$

- Figure P1.10 shows a frustum of a cone. Match each of the expressions

- $\pi(r_1 + r_2)[h^2 + (r_2 - r_1)^2]^{1/2}$,
- $2\pi(r_1 + r_2)$, and
- $\pi h(r_1^2 + r_1 r_2 + r_2^2)/3$

with the quantity it describes: (d) the total circumference of the flat circular faces, (e) the volume, or (f) the area of the curved surface.

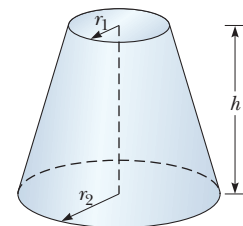


Figure P1.10

- Kinetic energy K (Chapter 7) has dimensions $\text{kg} \cdot \text{m}^2/\text{s}^2$. It can be written in terms of the momentum p (Chapter 9) and mass m as

$$K = \frac{p^2}{2m}$$

(a) Determine the proper units for momentum using dimensional analysis. (b) The unit of force is the newton N, where $1 \text{ N} = 1 \text{ kg} \cdot \text{m}/\text{s}^2$. What are the units of momentum p in terms of a newton and another fundamental SI unit?

12. Newton's law of universal gravitation is represented by

$$F = \frac{GMm}{r^2}$$

where F is the magnitude of the gravitational force exerted by one small object on another, M and m are the masses of the objects, and r is a distance. Force has the SI units $\text{kg} \cdot \text{m}/\text{s}^2$. What are the SI units of the proportionality constant G ?

13. The position of a particle moving under uniform acceleration is some function of time and the acceleration. Suppose we write this position as $x = ka^m t^n$, where k is a dimensionless constant. Show by dimensional analysis that this expression is satisfied if $m = 1$ and $n = 2$. Can this analysis give the value of k ?
14. (a) Assume the equation $x = At^3 + Bt$ describes the motion of a particular object, with x having the dimension of length and t having the dimension of time. Determine the dimensions of the constants A and B . (b) Determine the dimensions of the derivative $dx/dt = 3At^2 + B$.

Section 1.4 Conversion of Units

15. A solid piece of lead has a mass of 23.94 g and a volume of 2.10 cm^3 . From these data, calculate the density of lead in SI units (kilograms per cubic meter).

16. An ore loader moves 1 200 tons/h from a mine to the surface. Convert this rate to pounds per second, using $1 \text{ ton} = 2 000 \text{ lb}$.

17. A rectangular building lot has a width of 75.0 ft and a length of 125 ft. Determine the area of this lot in square meters.

18. Suppose your hair grows at the rate 1/32 in. per day. Find the rate at which it grows in nanometers per second. Because the distance between atoms in a molecule is on the order of 0.1 nm, your answer suggests how rapidly layers of atoms are assembled in this protein synthesis.

19. Why is the following situation impossible? A student's dormitory room measures 3.8 m by 3.6 m, and its ceiling is 2.5 m high. After the student completes his physics course, he displays his dedication by completely wall-papering the walls of the room with the pages from his copy of volume 1 (Chapters 1–22) of this textbook. He even covers the door and window.

20. A pyramid has a height of 481 ft, and its base covers an area of 13.0 acres (Fig. P1.20). The volume of a pyramid is given by the expression $V = \frac{1}{3}Bh$, where B is the area of the base and h is the height. Find the volume of this pyramid in cubic meters. (1 acre = 43 560 ft^2)

21. The pyramid described in Problem 20 contains approximately 2 million stone blocks that average 2.50 tons each. Find the weight of this pyramid in pounds.



Figure P1.20 Problems 20 and 21.

22. Assume it takes 7.00 min to fill a 30.0-gal gasoline tank.

- (a) Calculate the rate at which the tank is filled in gallons per second. (b) Calculate the rate at which the tank is filled in cubic meters per second. (c) Determine the time interval, in hours, required to fill a 1.00- m^3 volume at the same rate. (1 U.S. gal = 231 in^3)

23. A section of land has an area of 1 square mile and contains 640 acres. Determine the number of square meters in 1 acre.

24. A house is 50.0 ft long and 26 ft wide and has 8.0-ft-high ceilings. What is the volume of the interior of the house in cubic meters and in cubic centimeters?

25. One cubic meter (1.00 m^3) of aluminum has a mass of $2.70 \times 10^3 \text{ kg}$, and the same volume of iron has a mass of $7.86 \times 10^3 \text{ kg}$. Find the radius of a solid aluminum sphere that will balance a solid iron sphere of radius 2.00 cm on an equal-arm balance.

26. Let ρ_{Al} represent the density of aluminum and ρ_{Fe} that of iron. Find the radius of a solid aluminum sphere that balances a solid iron sphere of radius r_{Fe} on an equal-arm balance.

27. One gallon of paint (volume = $3.78 \times 10^{-3} \text{ m}^3$) covers an area of 25.0 m^2 . What is the thickness of the fresh paint on the wall?

28. An auditorium measures 40.0 m \times 20.0 m \times 12.0 m. The density of air is 1.20 kg/m^3 . What are (a) the volume of the room in cubic feet and (b) the weight of air in the room in pounds?

29. (a) At the time of this book's printing, the U.S. national debt is about \$16 trillion. If payments were made at the rate of \$1 000 per second, how many years would it take to pay off the debt, assuming no interest were charged? (b) A dollar bill is about 15.5 cm long. How many dollar bills attached end to end would it take to reach the Moon? The front endpapers give the Earth–Moon distance. Note: Before doing these calculations, try to guess at the answers. You may be very surprised.

30. A hydrogen atom has a diameter of $1.06 \times 10^{-10} \text{ m}$. The nucleus of the hydrogen atom has a diameter of approximately $2.40 \times 10^{-15} \text{ m}$. (a) For a scale model, represent the diameter of the hydrogen atom by the playing length of an American football field (100 yards = 300 ft) and determine the diameter of the nucleus in millimeters. (b) Find the ratio of the volume of the hydrogen atom to the volume of its nucleus.

Section 1.5 Estimates and Order-of-Magnitude Calculations

Note: In your solutions to Problems 31 through 34, state the quantities you measure or estimate and the values you take for them.

31. Find the order of magnitude of the number of table-tennis balls that would fit into a typical-size room (without being crushed).
32. (a) Compute the order of magnitude of the mass of a bathtub half full of water. (b) Compute the order of magnitude of the mass of a bathtub half full of copper coins.
33. To an order of magnitude, how many piano tuners reside in New York City? The physicist Enrico Fermi was famous for asking questions like this one on oral Ph.D. qualifying examinations.
34. An automobile tire is rated to last for 50 000 miles. To an order of magnitude, through how many revolutions will it turn over its lifetime?

Section 1.6 Significant Figures

Note: Appendix B.8 on propagation of uncertainty may be useful in solving some problems in this section.

35. A rectangular plate has a length of (21.3 ± 0.2) cm and a width of (9.8 ± 0.1) cm. Calculate the area of the plate, including its uncertainty.
36. How many significant figures are in the following numbers? (a) 78.9 ± 0.2 (b) 3.788×10^9 (c) 2.46×10^{-6} (d) 0.005 3
37. The *tropical year*, the time interval from one vernal equinox to the next vernal equinox, is the basis for our calendar. It contains 365.242 199 days. Find the number of seconds in a tropical year.
38. Carry out the arithmetic operations (a) the sum of the measured values 756, 37.2, 0.83, and 2; (b) the product $0.003 2 \times 356.3$; and (c) the product $5.620 \times \pi$.

Note: The next 13 problems call on mathematical skills from your prior education that will be useful throughout this course.

39. **Review.** In a community college parking lot, the number of ordinary cars is larger than the number of sport utility vehicles by 94.7%. The difference between the number of cars and the number of SUVs is 18. Find the number of SUVs in the lot.
40. **Review.** While you are on a trip to Europe, you must purchase hazelnut chocolate bars for your grandmother. Eating just one square each day, she makes each large bar last for one and one-third months. How many bars will constitute a year's supply for her?
41. **Review.** A child is surprised that because of sales tax she must pay \$1.36 for a toy marked \$1.25. What is the effective tax rate on this purchase, expressed as a percentage?
42. **Review.** The average density of the planet Uranus is 1.27×10^3 kg/m³. The ratio of the mass of Neptune to

that of Uranus is 1.19. The ratio of the radius of Neptune to that of Uranus is 0.969. Find the average density of Neptune.

43. **Review.** The ratio of the number of sparrows visiting a bird feeder to the number of more interesting birds is 2.25. On a morning when altogether 91 birds visit the feeder, what is the number of sparrows?
44. **Review.** Find every angle θ between 0 and 360° for which the ratio of $\sin \theta$ to $\cos \theta$ is -3.00 .

45. **Review.** For the right triangle shown in Figure P1.45, what are (a) the length of the unknown side, (b) the tangent of θ , and (c) the sine of ϕ ?

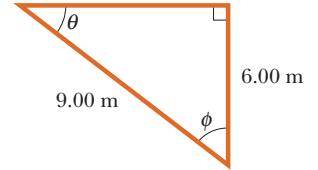


Figure P1.45

46. **Review.** Prove that one solution of the equation

$$2.00x^4 - 3.00x^3 + 5.00x = 70.0$$

is $x = -2.22$.

47. **Review.** A pet lamb grows rapidly, with its mass proportional to the cube of its length. When the lamb's length changes by 15.8%, its mass increases by 17.3 kg. Find the lamb's mass at the end of this process.

48. **Review.** A highway curve forms a section of a circle. A car goes around the curve as shown in the helicopter view of Figure P1.48. Its dashboard compass shows that the car is initially heading due east. After it travels $d = 840$ m, it is heading $\theta = 35.0^\circ$ south of east. Find the radius of curvature of its path. *Suggestion:* You may find it useful to learn a geometric theorem stated in Appendix B.3.

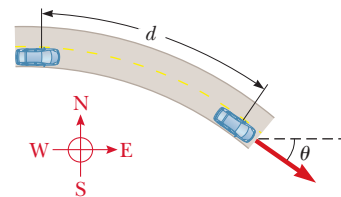


Figure P1.48

49. **Review.** From the set of equations

$$p = 3q$$

$$pr = qs$$

$$\frac{1}{2}pr^2 + \frac{1}{2}qs^2 = \frac{1}{2}qt^2$$

involving the unknowns p , q , r , s , and t , find the value of the ratio of t to r .

50. **Review.** Figure P1.50 on page 18 shows students studying the thermal conduction of energy into cylindrical blocks of ice. As we will see in Chapter 20, this process is described by the equation

$$\frac{Q}{\Delta t} = \frac{k\pi d^2(T_h - T_c)}{4L}$$

For experimental control, in one set of trials all quantities except d and Δt are constant. (a) If d is made three

times larger, does the equation predict that Δt will get larger or get smaller? By what factor? (b) What pattern of proportionality of Δt to d does the equation predict? (c) To display this proportionality as a straight line on a graph, what quantities should you plot on the horizontal and vertical axes? (d) What expression represents the theoretical slope of this graph?



Figure P1.50

51. **Review.** A student is supplied with a stack of copy paper, ruler, compass, scissors, and a sensitive balance. He cuts out various shapes in various sizes, calculates their areas, measures their masses, and prepares the graph of Figure P1.51. (a) Consider the fourth experimental point from the top. How far is it from the best-fit straight line? Express your answer as a difference in vertical-axis coordinate. (b) Express your answer as a percentage. (c) Calculate the slope of the line. (d) State what the graph demonstrates, referring to the shape of the graph and the results of parts (b) and (c). (e) Describe whether this result should be expected theoretically. (f) Describe the physical meaning of the slope.

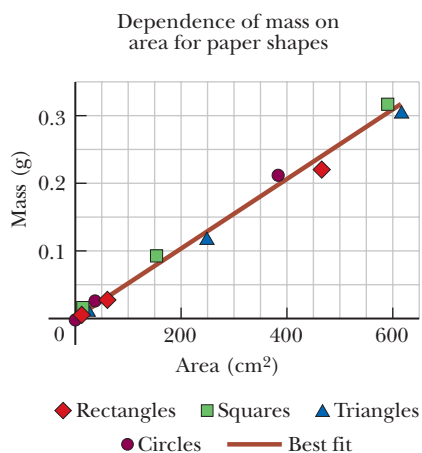


Figure P1.51

52. The radius of a uniform solid sphere is measured to be (6.50 ± 0.20) cm, and its mass is measured to be (1.85 ± 0.02) kg. Determine the density of the sphere in kilograms per cubic meter and the uncertainty in the density.
53. A sidewalk is to be constructed around a swimming pool that measures (10.0 ± 0.1) m by (17.0 ± 0.1) m.

If the sidewalk is to measure (1.00 ± 0.01) m wide by (9.0 ± 0.1) cm thick, what volume of concrete is needed and what is the approximate uncertainty of this volume?

Additional Problems

54. Collectible coins are sometimes plated with gold to enhance their beauty and value. Consider a commemorative quarter-dollar advertised for sale at \$4.98. It has a diameter of 24.1 mm and a thickness of 1.78 mm, and it is completely covered with a layer of pure gold $0.180 \mu\text{m}$ thick. The volume of the plating is equal to the thickness of the layer multiplied by the area to which it is applied. The patterns on the faces of the coin and the grooves on its edge have a negligible effect on its area. Assume the price of gold is \$25.0 per gram. (a) Find the cost of the gold added to the coin. (b) Does the cost of the gold significantly enhance the value of the coin? Explain your answer.
55. In a situation in which data are known to three significant digits, we write $6.379 \text{ m} = 6.38 \text{ m}$ and $6.374 \text{ m} = 6.37 \text{ m}$. When a number ends in 5, we arbitrarily choose to write $6.375 \text{ m} = 6.38 \text{ m}$. We could equally well write $6.375 \text{ m} = 6.37 \text{ m}$, “rounding down” instead of “rounding up,” because we would change the number 6.375 by equal increments in both cases. Now consider an order-of-magnitude estimate, in which factors of change rather than increments are important. We write $500 \text{ m} \sim 10^3 \text{ m}$ because 500 differs from 100 by a factor of 5 while it differs from 1 000 by only a factor of 2. We write $437 \text{ m} \sim 10^3 \text{ m}$ and $305 \text{ m} \sim 10^2 \text{ m}$. What distance differs from 100 m and from 1 000 m by equal factors so that we could equally well choose to represent its order of magnitude as $\sim 10^2 \text{ m}$ or as $\sim 10^3 \text{ m}$?
56. (a) What is the order of magnitude of the number of microorganisms in the human intestinal tract? A typical bacterial length scale is 10^{-6} m . Estimate the intestinal volume and assume 1% of it is occupied by bacteria. (b) Does the number of bacteria suggest whether the bacteria are beneficial, dangerous, or neutral for the human body? What functions could they serve?
57. The diameter of our disk-shaped galaxy, the Milky Way, is about 1.0×10^5 light-years (ly). The distance to the Andromeda galaxy (Fig. P1.57), which is the spiral galaxy nearest to the Milky Way, is about 2.0 million ly. If a scale model represents the Milky Way and Andromeda



Figure P1.57 The Andromeda galaxy.

galaxies as dinner plates 25 cm in diameter, determine the distance between the centers of the two plates.

58. Why is the following situation impossible? In an effort to boost interest in a television game show, each weekly winner is offered an additional \$1 million bonus prize if he or she can personally count out that exact amount from a supply of one-dollar bills. The winner must do this task under supervision by television show executives and within one 40-hour work week. To the dismay of the show's producers, most contestants succeed at the challenge.

59. A high fountain of water is located at the center of a circular pool as shown in Figure P1.59. A student walks around the pool and measures its circumference to be 15.0 m. Next, the student stands at the edge of the pool and uses a protractor to gauge the angle of elevation of the top of the fountain to be $\phi = 55.0^\circ$. How high is the fountain?



Figure P1.59
Problems 59 and 60.

60. A water fountain is at the center of a circular pool as shown in Figure P1.59. A student walks around the pool and measures its circumference C . Next, he stands at the edge of the pool and uses a protractor to measure the angle of elevation ϕ of his sightline to the top of the water jet. How high is the fountain?
61. The data in the following table represent measurements of the masses and dimensions of solid cylinders of aluminum, copper, brass, tin, and iron. (a) Use these data to calculate the densities of these substances. (b) State how your results compare with those given in Table 14.1.

Substance	Mass (g)	Diameter (cm)	Length (cm)
Aluminum	51.5	2.52	3.75
Copper	56.3	1.23	5.06
Brass	94.4	1.54	5.69
Tin	69.1	1.75	3.74
Iron	216.1	1.89	9.77

62. The distance from the Sun to the nearest star is about 4×10^{16} m. The Milky Way galaxy (Fig. P1.62) is roughly



Richard Payne/NASA

Figure P1.62 The Milky Way galaxy.

a disk of diameter $\sim 10^{21}$ m and thickness $\sim 10^{19}$ m. Find the order of magnitude of the number of stars in the Milky Way. Assume the distance between the Sun and our nearest neighbor is typical.

63. Assume there are 100 million passenger cars in the United States and the average fuel efficiency is 20 mi/gal of gasoline. If the average distance traveled by each car is 10 000 mi/yr, how much gasoline would be saved per year if the average fuel efficiency could be increased to 25 mi/gal?

64. A spherical shell has an outside radius of 2.60 cm and an inside radius of a . The shell wall has uniform thickness and is made of a material with density 4.70 g/cm^3 . The space inside the shell is filled with a liquid having a density of 1.23 g/cm^3 . (a) Find the mass m of the sphere, including its contents, as a function of a . (b) For what value of the variable a does m have its maximum possible value? (c) What is this maximum mass? (d) Explain whether the value from part (c) agrees with the result of a direct calculation of the mass of a solid sphere of uniform density made of the same material as the shell. (e) **What If?** Would the answer to part (a) change if the inner wall were not concentric with the outer wall?
65. Bacteria and other prokaryotes are found deep underground, in water, and in the air. One micron (10^{-6} m) is a typical length scale associated with these microbes. (a) Estimate the total number of bacteria and other prokaryotes on the Earth. (b) Estimate the total mass of all such microbes.
66. Air is blown into a spherical balloon so that, when its radius is 6.50 cm, its radius is increasing at the rate 0.900 cm/s. (a) Find the rate at which the volume of the balloon is increasing. (b) If this volume flow rate of air entering the balloon is constant, at what rate will the radius be increasing when the radius is 13.0 cm? (c) Explain physically why the answer to part (b) is larger or smaller than 0.9 cm/s, if it is different.

67. A rod extending between $x = 0$ and $x = 14.0$ cm has uniform cross-sectional area $A = 9.00 \text{ cm}^2$. Its density increases steadily between its ends from 2.70 g/cm^3 to 19.3 g/cm^3 . (a) Identify the constants B and C required in the expression $\rho = B + Cx$ to describe the variable density. (b) The mass of the rod is given by

$$m = \int_{\text{all material}} \rho dV = \int_{\text{all } x} \rho A dx = \int_0^{14.0 \text{ cm}} (B + Cx)(9.00 \text{ cm}^2) dx$$

Carry out the integration to find the mass of the rod.

68. In physics, it is important to use mathematical approximations. (a) Demonstrate that for small angles ($< 20^\circ$)

$$\tan \alpha \approx \sin \alpha \approx \alpha = \frac{\pi \alpha'}{180^\circ}$$

where α is in radians and α' is in degrees. (b) Use a calculator to find the largest angle for which $\tan \alpha$ may be approximated by α with an error less than 10.0%.

69. The consumption of natural gas by a company satisfies the empirical equation $V = 1.50t + 0.008 00t^2$, where V

is the volume of gas in millions of cubic feet and t is the time in months. Express this equation in units of cubic feet and seconds. Assume a month is 30.0 days.

- 70.** **GP** A woman wishing to know the height of a mountain measures the angle of elevation of the mountaintop as 12.0° . After walking 1.00 km closer to the mountain on level ground, she finds the angle to be 14.0° . (a) Draw a picture of the problem, neglecting the height of the woman's eyes above the ground. *Hint:* Use two triangles. (b) Using the symbol y to represent the mountain height and the symbol x to represent the woman's original distance from the mountain, label the picture. (c) Using the labeled picture, write two trigonometric equations relating the two selected variables. (d) Find the height y .

- 71.** **AMT** A child loves to watch as you fill a transparent plastic bottle with shampoo (Fig P1.71). Every horizontal cross section of the bottle is circular, but the diameters of the circles have different values. You pour the brightly colored shampoo into the bottle at a constant rate of $16.5 \text{ cm}^3/\text{s}$. At what rate is its level in the bottle rising (a) at a point where the diameter of the bottle is 6.30 cm and (b) at a point where the diameter is 1.35 cm?

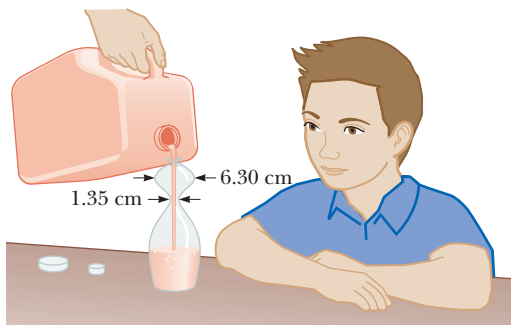


Figure P1.71

Challenge Problems

- 72.** A woman stands at a horizontal distance x from a mountain and measures the angle of elevation of the mountaintop above the horizontal as θ . After walking a distance d closer to the mountain on level ground, she finds the angle to be ϕ . Find a general equation for the height y of the mountain in terms of d , ϕ , and θ , neglecting the height of her eyes above the ground.
- 73.** You stand in a flat meadow and observe two cows (Fig. P1.73). Cow A is due north of you and 15.0 m from your position. Cow B is 25.0 m from your position. From your point of view, the angle between cow A and cow B is 20.0° , with cow B appearing to the right of cow A. (a) How far apart are cow A and cow B? (b) Consider the view seen by cow A. According to this cow, what is the angle between you and cow B? (c) Consider the view seen by cow B. According to this cow, what is the angle between you and cow A? *Hint:* What does the situation look like to a hummingbird hovering above the meadow? (d) Two stars in the sky appear to be 20.0° apart. Star A is 15.0 ly from the Earth, and star B, appearing to the right of star A, is 25.0 ly from the Earth. To an inhabitant of a planet orbiting star A, what is the angle in the sky between star B and our Sun?




Figure P1.73 Your view of two cows in a meadow. Cow A is due north of you. You must rotate your eyes through an angle of 20.0° to look from cow A to cow B.

Motion in One Dimension

CHAPTER

2



- 2.1 Position, Velocity, and Speed
 - 2.2 Instantaneous Velocity and Speed
 - 2.3 Analysis Model: Particle Under Constant Velocity
 - 2.4 Acceleration
 - 2.5 Motion Diagrams
 - 2.6 Analysis Model: Particle Under Constant Acceleration
 - 2.7 Freely Falling Objects
 - 2.8 Kinematic Equations Derived from Calculus
- General Problem-Solving Strategy

As a first step in studying classical mechanics, we describe the motion of an object while ignoring the interactions with external agents that might be affecting or modifying that motion. This portion of classical mechanics is called *kinematics*. (The word *kinematics* has the same root as *cinema*.) In this chapter, we consider only motion in one dimension, that is, motion of an object along a straight line.

From everyday experience, we recognize that motion of an object represents a continuous change in the object's position. In physics, we can categorize motion into three types: translational, rotational, and vibrational. A car traveling on a highway is an example of translational motion, the Earth's spin on its axis is an example of rotational motion, and the back-and-forth movement of a pendulum is an example of vibrational motion. In this and the next few chapters, we are concerned only with translational motion. (Later in the book we shall discuss rotational and vibrational motions.)

In our study of translational motion, we use what is called the **particle model** and describe the moving object as a *particle* regardless of its size. Remember our discussion of making models for physical situations in Section 1.2. In general, a **particle is a point-like object, that is, an object that has mass but is of infinitesimal size**. For example, if we wish to describe the motion of the Earth around the Sun, we can treat the Earth as a particle and

In drag racing, a driver wants as large an acceleration as possible. In a distance of one-quarter mile, a vehicle reaches speeds of more than 320 mi/h, covering the entire distance in under 5 s. (George Lepp/Stone/Getty Images)

obtain reasonably accurate data about its orbit. This approximation is justified because the radius of the Earth's orbit is large compared with the dimensions of the Earth and the Sun. As an example on a much smaller scale, it is possible to explain the pressure exerted by a gas on the walls of a container by treating the gas molecules as particles, without regard for the internal structure of the molecules.

2.1 Position, Velocity, and Speed

Position ▶ A particle's **position** x is the location of the particle with respect to a chosen reference point that we can consider to be the origin of a coordinate system. The motion of a particle is completely known if the particle's position in space is known at all times.

Consider a car moving back and forth along the x axis as in Figure 2.1a. When we begin collecting position data, the car is 30 m to the right of the reference position $x = 0$. We will use the particle model by identifying some point on the car, perhaps the front door handle, as a particle representing the entire car.

We start our clock, and once every 10 s we note the car's position. As you can see from Table 2.1, the car moves to the right (which we have defined as the positive direction) during the first 10 s of motion, from position **A** to position **B**. After **B**, the position values begin to decrease, suggesting the car is backing up from position **B** through position **F**. In fact, at **D**, 30 s after we start measuring, the car is at the origin of coordinates (see Fig. 2.1a). It continues moving to the left and is more than 50 m to the left of $x = 0$ when we stop recording information after our sixth data point. A graphical representation of this information is presented in Figure 2.1b. Such a plot is called a *position–time graph*.

Notice the *alternative representations* of information that we have used for the motion of the car. Figure 2.1a is a *pictorial representation*, whereas Figure 2.1b is a *graphical representation*. Table 2.1 is a *tabular representation* of the same information. Using an alternative representation is often an excellent strategy for understanding the situation in a given problem. The ultimate goal in many problems is a *math-*

Table 2.1 Position of the Car at Various Times

Position	t (s)	x (m)
A	0	30
B	10	52
C	20	38
D	30	0
E	40	−37
F	50	−53

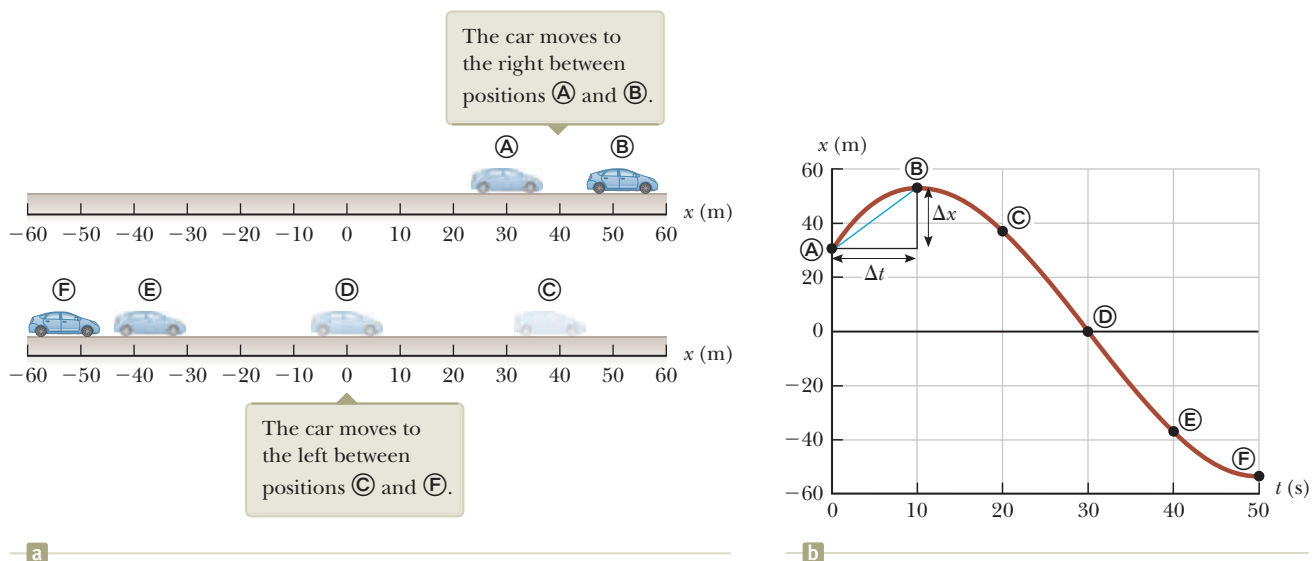


Figure 2.1 A car moves back and forth along a straight line. Because we are interested only in the car's translational motion, we can model it as a particle. Several representations of the information about the motion of the car can be used. Table 2.1 is a tabular representation of the information. (a) A pictorial representation of the motion of the car. (b) A graphical representation (position–time graph) of the motion of the car.

ematical representation, which can be analyzed to solve for some requested piece of information.

Given the data in Table 2.1, we can easily determine the change in position of the car for various time intervals. The **displacement** Δx of a particle is defined as its change in position in some time interval. As the particle moves from an initial position x_i to a final position x_f , its displacement is given by

$$\Delta x \equiv x_f - x_i \quad (2.1)$$

We use the capital Greek letter delta (Δ) to denote the *change* in a quantity. From this definition, we see that Δx is positive if x_f is greater than x_i and negative if x_f is less than x_i .

It is very important to recognize the difference between displacement and distance traveled. **Distance** is the length of a path followed by a particle. Consider, for example, the basketball players in Figure 2.2. If a player runs from his own team's basket down the court to the other team's basket and then returns to his own basket, the *displacement* of the player during this time interval is zero because he ended up at the same point as he started: $x_f = x_i$, so $\Delta x = 0$. During this time interval, however, he moved through a *distance* of twice the length of the basketball court. Distance is always represented as a positive number, whereas displacement can be either positive or negative.

Displacement is an example of a vector quantity. Many other physical quantities, including position, velocity, and acceleration, also are vectors. In general, a **vector quantity** requires the specification of both direction and magnitude. By contrast, a **scalar quantity** has a numerical value and no direction. In this chapter, we use positive (+) and negative (−) signs to indicate vector direction. For example, for horizontal motion let us arbitrarily specify to the right as being the positive direction. It follows that any object always moving to the right undergoes a positive displacement $\Delta x > 0$, and any object moving to the left undergoes a negative displacement so that $\Delta x < 0$. We shall treat vector quantities in greater detail in Chapter 3.

One very important point has not yet been mentioned. Notice that the data in Table 2.1 result only in the six data points in the graph in Figure 2.1b. Therefore, the motion of the particle is not completely known because we don't know its position at *all* times. The smooth curve drawn through the six points in the graph is only a *possibility* of the actual motion of the car. We only have information about six instants of time; we have no idea what happened between the data points. The smooth curve is a *guess* as to what happened, but keep in mind that it is *only* a guess. If the smooth curve does represent the actual motion of the car, the graph contains complete information about the entire 50-s interval during which we watch the car move.

It is much easier to see changes in position from the graph than from a verbal description or even a table of numbers. For example, it is clear that the car covers more ground during the middle of the 50-s interval than at the end. Between positions © and ㉔, the car travels almost 40 m, but during the last 10 s, between positions ㉕ and ㉖, it moves less than half that far. A common way of comparing these different motions is to divide the displacement Δx that occurs between two clock readings by the value of that particular time interval Δt . The result turns out to be a very useful ratio, one that we shall use many times. This ratio has been given a special name: the *average velocity*. The **average velocity** $v_{x,\text{avg}}$ of a particle is defined as the particle's displacement Δx divided by the time interval Δt during which that displacement occurs:

$$v_{x,\text{avg}} \equiv \frac{\Delta x}{\Delta t} \quad (2.2)$$

where the subscript x indicates motion along the x axis. From this definition we see that average velocity has dimensions of length divided by time (L/T), or meters per second in SI units.

◀ Displacement



Brian Drake/Time Life Pictures/Getty Images

Figure 2.2 On this basketball court, players run back and forth for the entire game. The distance that the players run over the duration of the game is nonzero. The displacement of the players over the duration of the game is approximately zero because they keep returning to the same point over and over again.

◀ Average velocity

The average velocity of a particle moving in one dimension can be positive or negative, depending on the sign of the displacement. (The time interval Δt is always positive.) If the coordinate of the particle increases in time (that is, if $x_f > x_i$), Δx is positive and $v_{x,\text{avg}} = \Delta x/\Delta t$ is positive. This case corresponds to a particle moving in the positive x direction, that is, toward larger values of x . If the coordinate decreases in time (that is, if $x_f < x_i$), Δx is negative and hence $v_{x,\text{avg}}$ is negative. This case corresponds to a particle moving in the negative x direction.

We can interpret average velocity geometrically by drawing a straight line between any two points on the position–time graph in Figure 2.1b. This line forms the hypotenuse of a right triangle of height Δx and base Δt . The slope of this line is the ratio $\Delta x/\Delta t$, which is what we have defined as average velocity in Equation 2.2. For example, the line between positions ④ and ⑤ in Figure 2.1b has a slope equal to the average velocity of the car between those two times, $(52 \text{ m} - 30 \text{ m})/(10 \text{ s} - 0) = 2.2 \text{ m/s}$.

In everyday usage, the terms *speed* and *velocity* are interchangeable. In physics, however, there is a clear distinction between these two quantities. Consider a marathon runner who runs a distance d of more than 40 km and yet ends up at her starting point. Her total displacement is zero, so her average velocity is zero! Nonetheless, we need to be able to quantify how fast she was running. A slightly different ratio accomplishes that for us. The **average speed** v_{avg} of a particle, a scalar quantity, is defined as the total distance d traveled divided by the total time interval required to travel that distance:

Average speed ►

$$v_{\text{avg}} \equiv \frac{d}{\Delta t} \quad (2.3)$$

Pitfall Prevention 2.1

Average Speed and Average Velocity

The magnitude of the average velocity is *not* the average speed. For example, consider the marathon runner discussed before Equation 2.3. The magnitude of her average velocity is zero, but her average speed is clearly not zero.

The SI unit of average speed is the same as the unit of average velocity: meters per second. Unlike average velocity, however, average speed has no direction and is always expressed as a positive number. Notice the clear distinction between the definitions of average velocity and average speed: average velocity (Eq. 2.2) is the *displacement* divided by the time interval, whereas average speed (Eq. 2.3) is the *distance* divided by the time interval.

Knowledge of the average velocity or average speed of a particle does not provide information about the details of the trip. For example, suppose it takes you 45.0 s to travel 100 m down a long, straight hallway toward your departure gate at an airport. At the 100-m mark, you realize you missed the restroom, and you return back 25.0 m along the same hallway, taking 10.0 s to make the return trip. The magnitude of your average *velocity* is $+75.0 \text{ m}/55.0 \text{ s} = +1.36 \text{ m/s}$. The average *speed* for your trip is $125 \text{ m}/55.0 \text{ s} = 2.27 \text{ m/s}$. You may have traveled at various speeds during the walk and, of course, you changed direction. Neither average velocity nor average speed provides information about these details.

- Quick Quiz 2.1** Under which of the following conditions is the magnitude of the average velocity of a particle moving in one dimension smaller than the average speed over some time interval? (a) A particle moves in the $+x$ direction without reversing. (b) A particle moves in the $-x$ direction without reversing. (c) A particle moves in the $+x$ direction and then reverses the direction of its motion.
- (d) There are no conditions for which this is true.

Example 2.1

Calculating the Average Velocity and Speed

Find the displacement, average velocity, and average speed of the car in Figure 2.1a between positions ④ and ⑤.

► 2.1 continued

SOLUTION

Consult Figure 2.1 to form a mental image of the car and its motion. We model the car as a particle. From the position–time graph given in Figure 2.1b, notice that $x_{\text{A}} = 30 \text{ m}$ at $t_{\text{A}} = 0 \text{ s}$ and that $x_{\text{E}} = -53 \text{ m}$ at $t_{\text{E}} = 50 \text{ s}$.

Use Equation 2.1 to find the displacement of the car: $\Delta x = x_{\text{E}} - x_{\text{A}} = -53 \text{ m} - 30 \text{ m} = -83 \text{ m}$

This result means that the car ends up 83 m in the negative direction (to the left, in this case) from where it started. This number has the correct units and is of the same order of magnitude as the supplied data. A quick look at Figure 2.1a indicates that it is the correct answer.

Use Equation 2.2 to find the car’s average velocity:

$$v_{x,\text{avg}} = \frac{x_{\text{E}} - x_{\text{A}}}{t_{\text{E}} - t_{\text{A}}} = \frac{-53 \text{ m} - 30 \text{ m}}{50 \text{ s} - 0 \text{ s}} = \frac{-83 \text{ m}}{50 \text{ s}} = -1.7 \text{ m/s}$$

We cannot unambiguously find the average speed of the car from the data in Table 2.1 because we do not have information about the positions of the car between the data points. If we adopt the assumption that the details of the car’s position are described by the curve in Figure 2.1b, the distance traveled is 22 m (from A to B) plus 105 m (from B to E), for a total of 127 m.

Use Equation 2.3 to find the car’s average speed: $v_{\text{avg}} = \frac{127 \text{ m}}{50 \text{ s}} = 2.5 \text{ m/s}$

Notice that the average speed is positive, as it must be. Suppose the red-brown curve in Figure 2.1b were different so that between 0 s and 10 s it went from A up to 100 m and then came back down to B . The average speed of the car would change because the distance is different, but the average velocity would not change.

2.2 Instantaneous Velocity and Speed

Often we need to know the velocity of a particle at a particular instant in time t rather than the average velocity over a finite time interval Δt . In other words, you would like to be able to specify your velocity just as precisely as you can specify your position by noting what is happening at a specific clock reading, that is, at some specific instant. What does it mean to talk about how quickly something is moving if we “freeze time” and talk only about an individual instant? In the late 1600s, with the invention of calculus, scientists began to understand how to describe an object’s motion at any moment in time.

To see how that is done, consider Figure 2.3a (page 26), which is a reproduction of the graph in Figure 2.1b. What is the particle’s velocity at $t = 0$? We have already discussed the average velocity for the interval during which the car moved from position A to position B (given by the slope of the blue line) and for the interval during which it moved from A to E (represented by the slope of the longer blue line and calculated in Example 2.1). The car starts out by moving to the right, which we defined to be the positive direction. Therefore, being positive, the value of the average velocity during the interval from A to B is more representative of the initial velocity than is the value of the average velocity during the interval from A to E , which we determined to be negative in Example 2.1. Now let us focus on the short blue line and slide point B to the left along the curve, toward point A , as in Figure 2.3b. The line between the points becomes steeper and steeper, and as the two points become extremely close together, the line becomes a tangent line to the curve, indicated by the green line in Figure 2.3b. The slope of this tangent line

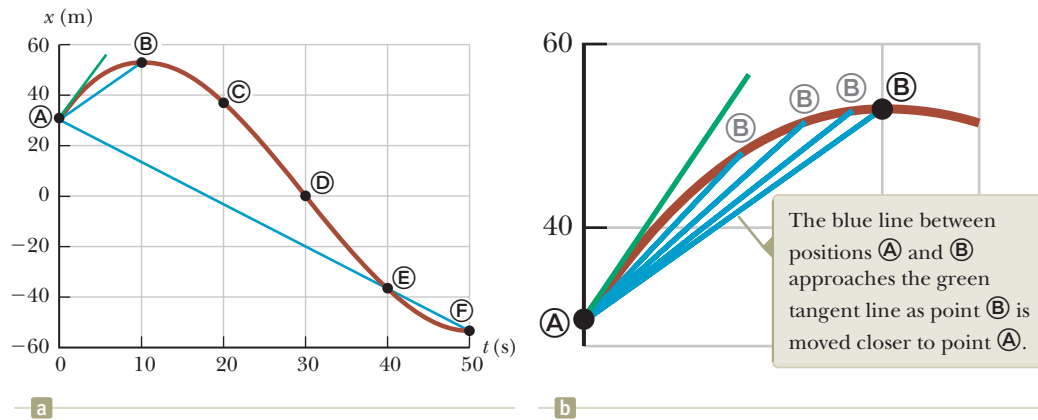


Figure 2.3 (a) Graph representing the motion of the car in Figure 2.1. (b) An enlargement of the upper-left-hand corner of the graph.

Pitfall Prevention 2.2

Slopes of Graphs In any graph of physical data, the *slope* represents the ratio of the change in the quantity represented on the vertical axis to the change in the quantity represented on the horizontal axis. Remember that a *slope has units* (unless both axes have the same units). The units of slope in Figures 2.1b and 2.3 are meters per second, the units of velocity.

Instantaneous velocity ►

Pitfall Prevention 2.3

Instantaneous Speed and Instantaneous Velocity In Pitfall Prevention 2.1, we argued that the magnitude of the average velocity is not the average speed. The magnitude of the instantaneous velocity, however, *is* the instantaneous speed. In an infinitesimal time interval, the magnitude of the displacement is equal to the distance traveled by the particle.

represents the velocity of the car at point **A**. What we have done is determine the *instantaneous velocity* at that moment. In other words, the **instantaneous velocity** v_x equals the limiting value of the ratio $\Delta x/\Delta t$ as Δt approaches zero:¹

$$v_x \equiv \lim_{\Delta t \rightarrow 0} \frac{\Delta x}{\Delta t} \quad (2.4)$$

In calculus notation, this limit is called the *derivative* of x with respect to t , written dx/dt :

$$v_x \equiv \lim_{\Delta t \rightarrow 0} \frac{\Delta x}{\Delta t} = \frac{dx}{dt} \quad (2.5)$$

The instantaneous velocity can be positive, negative, or zero. When the slope of the position–time graph is positive, such as at any time during the first 10 s in Figure 2.3, v_x is positive and the car is moving toward larger values of x . After point **B**, v_x is negative because the slope is negative and the car is moving toward smaller values of x . At point **B**, the slope and the instantaneous velocity are zero and the car is momentarily at rest.

From here on, we use the word *velocity* to designate instantaneous velocity. When we are interested in *average velocity*, we shall always use the adjective *average*.

The **instantaneous speed** of a particle is defined as the magnitude of its instantaneous velocity. As with average speed, instantaneous speed has no direction associated with it. For example, if one particle has an instantaneous velocity of +25 m/s along a given line and another particle has an instantaneous velocity of –25 m/s along the same line, both have a speed² of 25 m/s.

Quick Quiz 2.2 Are members of the highway patrol more interested in (a) your average speed or (b) your instantaneous speed as you drive?

Conceptual Example 2.2 The Velocity of Different Objects

Consider the following one-dimensional motions: **(A)** a ball thrown directly upward rises to a highest point and falls back into the thrower’s hand; **(B)** a race car starts from rest and speeds up to 100 m/s; and **(C)** a spacecraft drifts through space at constant velocity. Are there any points in the motion of these objects at which the instantaneous velocity has the same value as the average velocity over the entire motion? If so, identify the point(s).

¹Notice that the displacement Δx also approaches zero as Δt approaches zero, so the ratio looks like $0/0$. While this ratio may appear to be difficult to evaluate, the ratio does have a specific value. As Δx and Δt become smaller and smaller, the ratio $\Delta x/\Delta t$ approaches a value equal to the slope of the line tangent to the x -versus- t curve.

²As with velocity, we drop the adjective for instantaneous speed. *Speed* means “instantaneous speed.”

2.2 continued

SOLUTION

- (A) The average velocity for the thrown ball is zero because the ball returns to the starting point; therefore, its displacement is zero. There is one point at which the instantaneous velocity is zero: at the top of the motion.
- (B) The car's average velocity cannot be evaluated unambiguously with the information given, but it must have some value between 0 and 100 m/s. Because the car will have every instantaneous velocity between 0 and 100 m/s at some time during the interval, there must be some instant at which the instantaneous velocity is equal to the average velocity over the entire motion.
- (C) Because the spacecraft's instantaneous velocity is constant, its instantaneous velocity at *any* time and its average velocity over *any* time interval are the same.

Example 2.3 Average and Instantaneous Velocity

A particle moves along the x axis. Its position varies with time according to the expression $x = -4t + 2t^2$, where x is in meters and t is in seconds.³ The position–time graph for this motion is shown in Figure 2.4a. Because the position of the particle is given by a mathematical function, the motion of the particle is completely known, unlike that of the car in Figure 2.1. Notice that the particle moves in the negative x direction for the first second of motion, is momentarily at rest at the moment $t = 1$ s, and moves in the positive x direction at times $t > 1$ s.

- (A) Determine the displacement of the particle in the time intervals $t = 0$ to $t = 1$ s and $t = 1$ s to $t = 3$ s.

SOLUTION

From the graph in Figure 2.4a, form a mental representation of the particle's motion. Keep in mind that the particle does not move in a curved path in space such as that shown by the red-brown curve in the graphical representation. The particle moves only along the x axis in one dimension as shown in Figure 2.4b. At $t = 0$, is it moving to the right or to the left?

During the first time interval, the slope is negative and hence the average velocity is negative. Therefore, we know that the displacement between (A) and (B) must be a negative number having units of meters. Similarly, we expect the displacement between (B) and (D) to be positive.

In the first time interval, set $t_i = t_{\text{A}} = 0$ and $t_f = t_{\text{B}} = 1$ s and use Equation 2.1 to find the displacement:

$$\begin{aligned}\Delta x_{\text{A} \rightarrow \text{B}} &= x_f - x_i = x_{\text{B}} - x_{\text{A}} \\ &= [-4(1) + 2(1)^2] - [-4(0) + 2(0)^2] = \mathbf{-2 \text{ m}}\end{aligned}$$

For the second time interval ($t = 1$ s to $t = 3$ s), set $t_i = t_{\text{B}} = 1$ s and $t_f = t_{\text{D}} = 3$ s:

$$\begin{aligned}\Delta x_{\text{B} \rightarrow \text{D}} &= x_f - x_i = x_{\text{D}} - x_{\text{B}} \\ &= [-4(3) + 2(3)^2] - [-4(1) + 2(1)^2] = \mathbf{+8 \text{ m}}\end{aligned}$$

These displacements can also be read directly from the position–time graph.

- (B) Calculate the average velocity during these two time intervals.

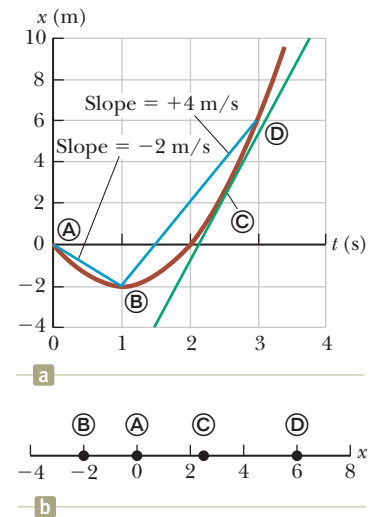


Figure 2.4 (Example 2.3) (a) Position–time graph for a particle having an x coordinate that varies in time according to the expression $x = -4t + 2t^2$. (b) The particle moves in one dimension along the x axis.

continued

³Simply to make it easier to read, we write the expression as $x = -4t + 2t^2$ rather than as $x = (-4.00 \text{ m/s})t + (2.00 \text{ m/s}^2)t^{2.00}$. When an equation summarizes measurements, consider its coefficients and exponents to have as many significant figures as other data quoted in a problem. Consider its coefficients to have the units required for dimensional consistency. When we start our clocks at $t = 0$, we usually do not mean to limit the precision to a single digit. Consider any zero value in this book to have as many significant figures as you need.

▶ 2.3 continued

SOLUTION

In the first time interval, use Equation 2.2 with $\Delta t = t_f - t_i = t_{\text{ⓐ}} - t_{\text{ⓐ}} = 1 \text{ s}$:

$$v_{x,\text{avg}}(\text{ⓐ} \rightarrow \text{ⓐ}) = \frac{\Delta x_{\text{ⓐ} \rightarrow \text{ⓐ}}}{\Delta t} = \frac{-2 \text{ m}}{1 \text{ s}} = -2 \text{ m/s}$$

In the second time interval, $\Delta t = 2 \text{ s}$:

$$v_{x,\text{avg}}(\text{ⓐ} \rightarrow \text{ⓐ}) = \frac{\Delta x_{\text{ⓐ} \rightarrow \text{ⓐ}}}{\Delta t} = \frac{8 \text{ m}}{2 \text{ s}} = +4 \text{ m/s}$$

These values are the same as the slopes of the blue lines joining these points in Figure 2.4a.

(C) Find the instantaneous velocity of the particle at $t = 2.5 \text{ s}$.

SOLUTION

Measure the slope of the green line at $t = 2.5 \text{ s}$ (point ⓐ) in Figure 2.4a:

$$v_x = \frac{10 \text{ m} - (-4 \text{ m})}{3.8 \text{ s} - 1.5 \text{ s}} = +6 \text{ m/s}$$

Notice that this instantaneous velocity is on the same order of magnitude as our previous results, that is, a few meters per second. Is that what you would have expected?

2.3 Analysis Model: Particle Under Constant Velocity

Analysis model ▶

In Section 1.2 we discussed the importance of making models. A particularly important model used in the solution to physics problems is an *analysis model*. An **analysis model** is a common situation that occurs time and again when solving physics problems. Because it represents a common situation, it also represents a common type of problem that we have solved before. When you identify an analysis model in a new problem, the solution to the new problem can be modeled after that of the previously-solved problem. Analysis models help us to recognize those common situations and guide us toward a solution to the problem. The form that an analysis model takes is a description of either (1) the behavior of some physical entity or (2) the interaction between that entity and the environment. When you encounter a new problem, you should identify the fundamental details of the problem and attempt to recognize which of the situations you have already seen that might be used as a model for the new problem. For example, suppose an automobile is moving along a straight freeway at a constant speed. Is it important that it is an automobile? Is it important that it is a freeway? If the answers to both questions are no, but the car moves in a straight line at constant speed, we model the automobile as a *particle under constant velocity*, which we will discuss in this section. Once the problem has been modeled, it is no longer about an automobile. It is about a particle undergoing a certain type of motion, a motion that we have studied before.

This method is somewhat similar to the common practice in the legal profession of finding “legal precedents.” If a previously resolved case can be found that is very similar legally to the current one, it is used as a model and an argument is made in court to link them logically. The finding in the previous case can then be used to sway the finding in the current case. We will do something similar in physics. For a given problem, we search for a “physics precedent,” a model with which we are already familiar and that can be applied to the current problem.

All of the analysis models that we will develop are based on four fundamental simplification models. The first of the four is the particle model discussed in the introduction to this chapter. We will look at a particle under various behaviors and environmental interactions. Further analysis models are introduced in later chapters based on simplification models of a *system*, a *rigid object*, and a *wave*. Once

we have introduced these analysis models, we shall see that they appear again and again in different problem situations.

When solving a problem, you should avoid browsing through the chapter looking for an equation that contains the unknown variable that is requested in the problem. In many cases, the equation you find may have nothing to do with the problem you are attempting to solve. It is *much* better to take this first step: **Identify the analysis model that is appropriate for the problem.** To do so, think carefully about what is going on in the problem and match it to a situation you have seen before. Once the analysis model is identified, there are a small number of equations from which to choose that are appropriate for that model, sometimes only one equation. Therefore, **the model tells you which equation(s) to use for the mathematical representation.**

Let us use Equation 2.2 to build our first analysis model for solving problems. We imagine a particle moving with a constant velocity. The model of a **particle under constant velocity** can be applied in *any* situation in which an entity that can be modeled as a particle is moving with constant velocity. This situation occurs frequently, so this model is important.

If the velocity of a particle is constant, its instantaneous velocity at any instant during a time interval is the same as the average velocity over the interval. That is, $v_x = v_{x,\text{avg}}$. Therefore, Equation 2.2 gives us an equation to be used in the mathematical representation of this situation:

$$v_x = \frac{\Delta x}{\Delta t} \quad (2.6)$$

Remembering that $\Delta x = x_f - x_i$, we see that $v_x = (x_f - x_i)/\Delta t$, or

$$x_f = x_i + v_x \Delta t$$

This equation tells us that the position of the particle is given by the sum of its original position x_i at time $t = 0$ plus the displacement $v_x \Delta t$ that occurs during the time interval Δt . In practice, we usually choose the time at the beginning of the interval to be $t_i = 0$ and the time at the end of the interval to be $t_f = t$, so our equation becomes

$$x_f = x_i + v_x t \quad (\text{for constant } v_x) \quad (2.7)$$

Equations 2.6 and 2.7 are the primary equations used in the model of a particle under constant velocity. Whenever you have identified the analysis model in a problem to be the particle under constant velocity, you can immediately turn to these equations.

Figure 2.5 is a graphical representation of the particle under constant velocity. On this position–time graph, the slope of the line representing the motion is constant and equal to the magnitude of the velocity. Equation 2.7, which is the equation of a straight line, is the mathematical representation of the particle under constant velocity model. The slope of the straight line is v_x and the y intercept is x_i in both representations.

Example 2.4 below shows an application of the particle under constant velocity model. Notice the analysis model icon **AM**, which will be used to identify examples in which analysis models are employed in the solution. Because of the widespread benefits of using the analysis model approach, you will notice that a large number of the examples in the book will carry such an icon.

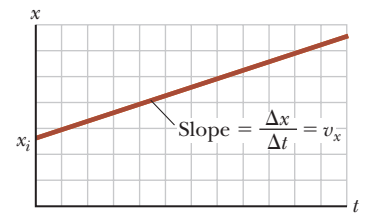


Figure 2.5 Position–time graph for a particle under constant velocity. The value of the constant velocity is the slope of the line.

◀ Position as a function of time for the particle under constant velocity model

Example 2.4

Modeling a Runner as a Particle

AM

A kinesiologist is studying the biomechanics of the human body. (*Kinesiology* is the study of the movement of the human body. Notice the connection to the word *kinematics*.) She determines the velocity of an experimental subject while he runs along a straight line at a constant rate. The kinesiologist starts the stopwatch at the moment the runner passes a given point and stops it after the runner has passed another point 20 m away. The time interval indicated on the stopwatch is 4.0 s.

(A) What is the runner's velocity?

continued

2.4 continued

SOLUTION

We model the moving runner as a particle because the size of the runner and the movement of arms and legs are unnecessary details. Because the problem states that the subject runs at a constant rate, we can model him as a *particle under constant velocity*.

Having identified the model, we can use Equation 2.6 to find the constant velocity of the runner:

$$v_x = \frac{\Delta x}{\Delta t} = \frac{x_f - x_i}{\Delta t} = \frac{20 \text{ m} - 0}{4.0 \text{ s}} = 5.0 \text{ m/s}$$

(B) If the runner continues his motion after the stopwatch is stopped, what is his position after 10 s have passed?

SOLUTION

Use Equation 2.7 and the velocity found in part (A) to find the position of the particle at time $t = 10 \text{ s}$:

$$x_f = x_i + v_x t = 0 + (5.0 \text{ m/s})(10 \text{ s}) = 50 \text{ m}$$

Is the result for part (A) a reasonable speed for a human? How does it compare to world-record speeds in 100-m and 200-m sprints? Notice the value in part (B) is more than twice that of the 20-m position at which the stopwatch was stopped. Is this value consistent with the time of 10 s being more than twice the time of 4.0 s?

The mathematical manipulations for the particle under constant velocity stem from Equation 2.6 and its descendent, Equation 2.7. These equations can be used to solve for any variable in the equations that happens to be unknown if the other variables are known. For example, in part (B) of Example 2.4, we find the position when the velocity and the time are known. Similarly, if we know the velocity and the final position, we could use Equation 2.7 to find the time at which the runner is at this position.

A particle under constant velocity moves with a constant speed along a straight line. Now consider a particle moving with a constant speed through a distance d along a curved path. This situation can be represented with the model of a **particle under constant speed**. The primary equation for this model is Equation 2.3, with the average speed v_{avg} replaced by the constant speed v :

$$v = \frac{d}{\Delta t} \quad (2.8)$$

As an example, imagine a particle moving at a constant speed in a circular path. If the speed is 5.00 m/s and the radius of the path is 10.0 m, we can calculate the time interval required to complete one trip around the circle:

$$v = \frac{d}{\Delta t} \rightarrow \Delta t = \frac{d}{v} = \frac{2\pi r}{v} = \frac{2\pi(10.0 \text{ m})}{5.00 \text{ m/s}} = 12.6 \text{ s}$$

Analysis Model Particle Under Constant Velocity

Imagine a moving object that can be modeled as a particle. If it moves at a constant speed through a displacement Δx in a straight line in a time interval Δt , its constant velocity is

$$v_x = \frac{\Delta x}{\Delta t} \quad (2.6)$$

The position of the particle as a function of time is given by

$$x_f = x_i + v_x t \quad (2.7)$$

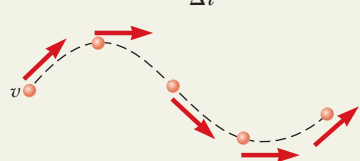


Examples:

- a meteoroid traveling through gravity-free space
- a car traveling at a constant speed on a straight highway
- a runner traveling at constant speed on a perfectly straight path
- an object moving at terminal speed through a viscous medium (Chapter 6)

Analysis Model Particle Under Constant Speed

Imagine a moving object that can be modeled as a particle. If it moves at a constant speed through a distance d along a straight line or a curved path in a time interval Δt , its constant speed is

$$v = \frac{d}{\Delta t} \quad (2.8)$$


Examples:

- a planet traveling around a perfectly circular orbit
- a car traveling at a constant speed on a curved racetrack
- a runner traveling at constant speed on a curved path
- a charged particle moving through a uniform magnetic field (Chapter 29)

2.4 Acceleration

In Example 2.3, we worked with a common situation in which the velocity of a particle changes while the particle is moving. When the velocity of a particle changes with time, the particle is said to be *accelerating*. For example, the magnitude of a car's velocity increases when you step on the gas and decreases when you apply the brakes. Let us see how to quantify acceleration.

Suppose an object that can be modeled as a particle moving along the x axis has an initial velocity v_{xi} at time t_i at position **A** and a final velocity v_{xf} at time t_f at position **B** as in Figure 2.6a. The red-brown curve in Figure 2.6b shows how the velocity varies with time. The **average acceleration** $a_{x,\text{avg}}$ of the particle is defined as the *change* in velocity Δv_x divided by the time interval Δt during which that change occurs:

$$a_{x,\text{avg}} \equiv \frac{\Delta v_x}{\Delta t} = \frac{v_{xf} - v_{xi}}{t_f - t_i} \quad (2.9)$$

◀ Average acceleration

As with velocity, when the motion being analyzed is one dimensional, we can use positive and negative signs to indicate the direction of the acceleration. Because the dimensions of velocity are L/T and the dimension of time is T , acceleration has dimensions of length divided by time squared, or L/T^2 . The SI unit of acceleration is meters per second squared (m/s^2). It might be easier to interpret these units if you think of them as meters per second per second. For example, suppose an object has an acceleration of $+2 \text{ m/s}^2$. You can interpret this value by forming a mental image of the object having a velocity that is along a straight line and is increasing by 2 m/s during every time interval of 1 s . If the object starts from rest,

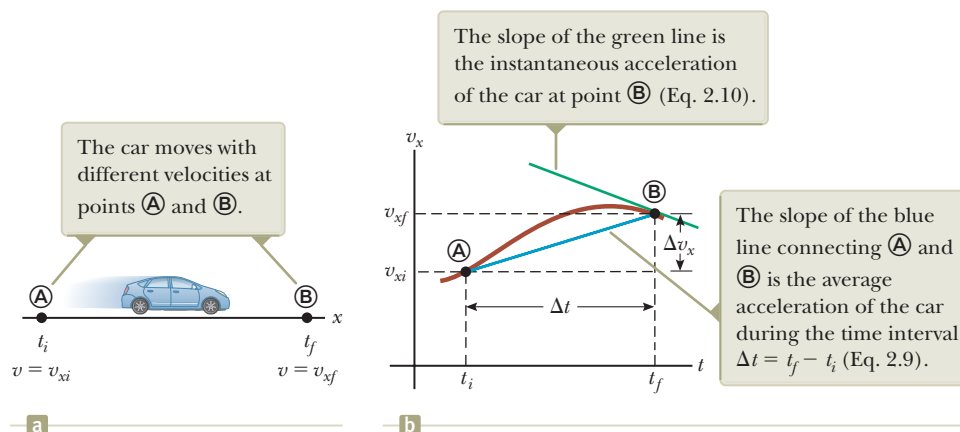


Figure 2.6 (a) A car, modeled as a particle, moving along the x axis from **A** to **B**, has velocity v_{xi} at $t = t_i$ and velocity v_{xf} at $t = t_f$. (b) Velocity–time graph (red-brown) for the particle moving in a straight line.

you should be able to picture it moving at a velocity of +2 m/s after 1 s, at +4 m/s after 2 s, and so on.

In some situations, the value of the average acceleration may be different over different time intervals. It is therefore useful to define the **instantaneous acceleration** as the limit of the average acceleration as Δt approaches zero. This concept is analogous to the definition of instantaneous velocity discussed in Section 2.2. If we imagine that point \textcircled{A} is brought closer and closer to point \textcircled{B} in Figure 2.6a and we take the limit of $\Delta v_x/\Delta t$ as Δt approaches zero, we obtain the instantaneous acceleration at point \textcircled{B} :

Instantaneous acceleration ►

$$a_x \equiv \lim_{\Delta t \rightarrow 0} \frac{\Delta v_x}{\Delta t} = \frac{dv_x}{dt} \quad (2.10)$$

That is, the instantaneous acceleration equals the derivative of the velocity with respect to time, which by definition is the slope of the velocity–time graph. The slope of the green line in Figure 2.6b is equal to the instantaneous acceleration at point \textcircled{B} . Notice that Figure 2.6b is a *velocity–time* graph, not a *position–time* graph like Figures 2.1b, 2.3, 2.4, and 2.5. Therefore, we see that just as the velocity of a moving particle is the slope at a point on the particle's x – t graph, the acceleration of a particle is the slope at a point on the particle's v_x – t graph. One can interpret the derivative of the velocity with respect to time as the time rate of change of velocity. If a_x is positive, the acceleration is in the positive x direction; if a_x is negative, the acceleration is in the negative x direction.

Figure 2.7 illustrates how an acceleration–time graph is related to a velocity–time graph. The acceleration at any time is the slope of the velocity–time graph at that time. Positive values of acceleration correspond to those points in Figure 2.7a where the velocity is increasing in the positive x direction. The acceleration reaches a maximum at time $t_{\textcircled{A}}$, when the slope of the velocity–time graph is a maximum. The acceleration then goes to zero at time $t_{\textcircled{B}}$, when the velocity is a maximum (that is, when the slope of the v_x – t graph is zero). The acceleration is negative when the velocity is decreasing in the positive x direction, and it reaches its most negative value at time $t_{\textcircled{C}}$.

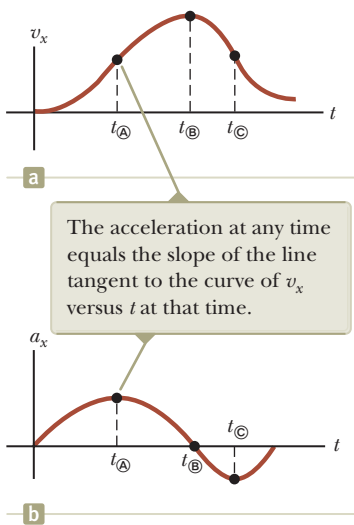


Figure 2.7 (a) The velocity–time graph for a particle moving along the x axis. (b) The instantaneous acceleration can be obtained from the velocity–time graph.

- Quick Quiz 2.3** Make a velocity–time graph for the car in Figure 2.1a. Suppose the speed limit for the road on which the car is driving is 30 km/h. True or False?
- The car exceeds the speed limit at some time within the time interval 0 – 50 s.

For the case of motion in a straight line, the direction of the velocity of an object and the direction of its acceleration are related as follows. When the object's velocity and acceleration are in the same direction, the object is speeding up. On the other hand, when the object's velocity and acceleration are in opposite directions, the object is slowing down.

To help with this discussion of the signs of velocity and acceleration, we can relate the acceleration of an object to the total *force* exerted on the object. In Chapter 5, we formally establish that **the force on an object is proportional to the acceleration of the object**:

$$F_x \propto a_x \quad (2.11)$$

This proportionality indicates that acceleration is caused by force. Furthermore, force and acceleration are both vectors, and the vectors are in the same direction. Therefore, let us think about the signs of velocity and acceleration by imagining a force applied to an object and causing it to accelerate. Let us assume the velocity and acceleration are in the same direction. This situation corresponds to an object that experiences a force acting in the same direction as its velocity. In this case, the object speeds up! Now suppose the velocity and acceleration are in opposite directions. In this situation, the object moves in some direction and experiences a force acting in the opposite direction. Therefore, the object slows

down! It is very useful to equate the direction of the acceleration to the direction of a force because it is easier from our everyday experience to think about what effect a force will have on an object than to think only in terms of the direction of the acceleration.

- Quick Quiz 2.4** If a car is traveling eastward and slowing down, what is the direction of the force on the car that causes it to slow down? (a) eastward (b) westward (c) neither eastward nor westward

From now on, we shall use the term *acceleration* to mean instantaneous acceleration. When we mean average acceleration, we shall always use the adjective *average*. Because $v_x = dx/dt$, the acceleration can also be written as

$$a_x = \frac{dv_x}{dt} = \frac{d}{dt}\left(\frac{dx}{dt}\right) = \frac{d^2x}{dt^2} \quad (2.12)$$

That is, in one-dimensional motion, the acceleration equals the *second derivative* of x with respect to time.

Pitfall Prevention 2.4

Negative Acceleration Keep in mind that *negative acceleration* does not necessarily mean that an object is *slowing down*. If the acceleration is negative and the velocity is negative, the object is speeding up!

Pitfall Prevention 2.5

Deceleration The word *deceleration* has the common popular connotation of *slowing down*. We will not use this word in this book because it confuses the definition we have given for negative acceleration.

Conceptual Example 2.5

Graphical Relationships Between x , v_x , and a_x

The position of an object moving along the x axis varies with time as in Figure 2.8a. Graph the velocity versus time and the acceleration versus time for the object.

SOLUTION

The velocity at any instant is the slope of the tangent to the x - t graph at that instant. Between $t = 0$ and $t = t_A$, the slope of the x - t graph increases uniformly, so the velocity increases linearly as shown in Figure 2.8b. Between t_A and t_B , the slope of the x - t graph is constant, so the velocity remains constant. Between t_B and t_C , the slope of the x - t graph decreases, so the value of the velocity in the v_x - t graph decreases. At t_C , the slope of the x - t graph is zero, so the velocity is zero at that instant. Between t_C and t_D , the slope of the x - t graph and therefore the velocity are negative and decrease uniformly in this interval. In the interval t_D to t_E , the slope of the x - t graph is still negative, and at t_E it goes to zero. Finally, after t_E , the slope of the x - t graph is zero, meaning that the object is at rest for $t > t_E$.

The acceleration at any instant is the slope of the tangent to the v_x - t graph at that instant. The graph of acceleration versus time for this object is shown in Figure 2.8c. The acceleration is constant and positive between 0 and t_A , where the slope of the v_x - t graph is positive. It is zero between t_A and t_B and for $t > t_E$ because the slope of the v_x - t graph is zero at these times. It is negative between t_B and t_C because the slope of the v_x - t graph is negative during this interval. Between t_C and t_E , the acceleration is positive like it is between 0 and t_A , but higher in value because the slope of the v_x - t graph is steeper.

Notice that the sudden changes in acceleration shown in Figure 2.8c are unphysical. Such instantaneous changes cannot occur in reality.

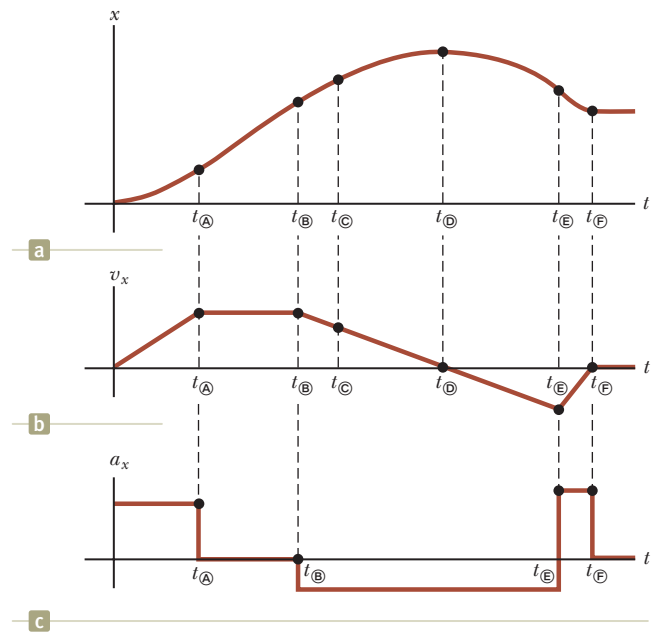


Figure 2.8 (Conceptual Example 2.5) (a) Position–time graph for an object moving along the x axis. (b) The velocity–time graph for the object is obtained by measuring the slope of the position–time graph at each instant. (c) The acceleration–time graph for the object is obtained by measuring the slope of the velocity–time graph at each instant.

Example 2.6 Average and Instantaneous Acceleration

The velocity of a particle moving along the x axis varies according to the expression $v_x = 40 - 5t^2$, where v_x is in meters per second and t is in seconds.

(A) Find the average acceleration in the time interval $t = 0$ to $t = 2.0$ s.

SOLUTION

Think about what the particle is doing from the mathematical representation. Is it moving at $t = 0$? In which direction? Does it speed up or slow down? Figure 2.9 is a v_x - t graph that was created from the velocity versus time expression given in the problem statement. Because the slope of the entire v_x - t curve is negative, we expect the acceleration to be negative.

Find the velocities at $t_i = t_{\text{A}} = 0$ and $t_f = t_{\text{B}} = 2.0$ s by substituting these values of t into the expression for the velocity:

Find the average acceleration in the specified time interval $\Delta t = t_{\text{B}} - t_{\text{A}} = 2.0$ s:

$$\begin{aligned} v_{x\text{A}} &= 40 - 5t_{\text{A}}^2 = 40 - 5(0)^2 = +40 \text{ m/s} \\ v_{x\text{B}} &= 40 - 5t_{\text{B}}^2 = 40 - 5(2.0)^2 = +20 \text{ m/s} \\ a_{x,\text{avg}} &= \frac{v_{xf} - v_{xi}}{t_f - t_i} = \frac{v_{x\text{B}} - v_{x\text{A}}}{t_{\text{B}} - t_{\text{A}}} = \frac{20 \text{ m/s} - 40 \text{ m/s}}{2.0 \text{ s} - 0 \text{ s}} \\ &= -10 \text{ m/s}^2 \end{aligned}$$

The negative sign is consistent with our expectations: the average acceleration, represented by the slope of the blue line joining the initial and final points on the velocity-time graph, is negative.

(B) Determine the acceleration at $t = 2.0$ s.

SOLUTION

Knowing that the initial velocity at any time t is $v_{xi} = 40 - 5t^2$, find the velocity at any later time $t + \Delta t$:

Find the change in velocity over the time interval Δt :

To find the acceleration at any time t , divide this expression by Δt and take the limit of the result as Δt approaches zero:

Substitute $t = 2.0$ s:

$$\begin{aligned} v_{xf} &= 40 - 5(t + \Delta t)^2 = 40 - 5t^2 - 10t\Delta t - 5(\Delta t)^2 \\ \Delta v_x &= v_{xf} - v_{xi} = -10t\Delta t - 5(\Delta t)^2 \\ a_x &= \lim_{\Delta t \rightarrow 0} \frac{\Delta v_x}{\Delta t} = \lim_{\Delta t \rightarrow 0} (-10t - 5\Delta t) = -10t \\ a_x &= (-10)(2.0) \text{ m/s}^2 = -20 \text{ m/s}^2 \end{aligned}$$

Because the velocity of the particle is positive and the acceleration is negative at this instant, the particle is slowing down.

Notice that the answers to parts (A) and (B) are different. The average acceleration in part (A) is the slope of the blue line in Figure 2.9 connecting points A and B. The instantaneous acceleration in part (B) is the slope of the green line tangent to the curve at point B. Notice also that the acceleration is *not* constant in this example. Situations involving constant acceleration are treated in Section 2.6.

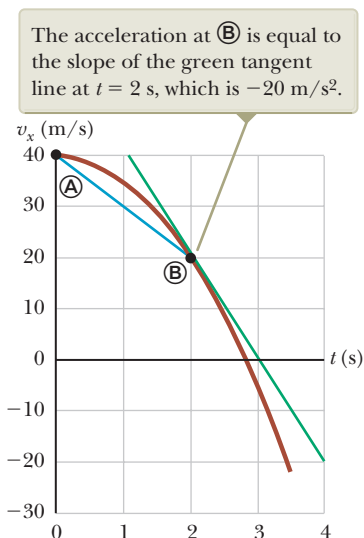


Figure 2.9 (Example 2.6) The velocity-time graph for a particle moving along the x axis according to the expression $v_x = 40 - 5t^2$.

So far, we have evaluated the derivatives of a function by starting with the definition of the function and then taking the limit of a specific ratio. If you are familiar with calculus, you should recognize that there are specific rules for taking

derivatives. These rules, which are listed in Appendix B.6, enable us to evaluate derivatives quickly. For instance, one rule tells us that the derivative of any constant is zero. As another example, suppose x is proportional to some power of t such as in the expression

$$x = At^n$$

where A and n are constants. (This expression is a very common functional form.) The derivative of x with respect to t is

$$\frac{dx}{dt} = nAt^{n-1}$$

Applying this rule to Example 2.6, in which $v_x = 40 - 5t^2$, we quickly find that the acceleration is $a_x = dv_x/dt = -10t$, as we found in part (B) of the example.

2.5 Motion Diagrams

The concepts of velocity and acceleration are often confused with each other, but in fact they are quite different quantities. In forming a mental representation of a moving object, a pictorial representation called a *motion diagram* is sometimes useful to describe the velocity and acceleration while an object is in motion.

A motion diagram can be formed by imagining a *stroboscopic* photograph of a moving object, which shows several images of the object taken as the strobe light flashes at a constant rate. Figure 2.1a is a motion diagram for the car studied in Section 2.1. Figure 2.10 represents three sets of strobe photographs of cars moving along a straight roadway in a single direction, from left to right. The time intervals between flashes of the stroboscope are equal in each part of the diagram. So as to not confuse the two vector quantities, we use red arrows for velocity and purple arrows for acceleration in Figure 2.10. The arrows are shown at several instants during the motion of the object. Let us describe the motion of the car in each diagram.

In Figure 2.10a, the images of the car are equally spaced, showing us that the car moves through the same displacement in each time interval. This equal spacing is consistent with the car moving with *constant positive velocity* and *zero acceleration*. We could model the car as a particle and describe it with the particle under constant velocity model.

In Figure 2.10b, the images become farther apart as time progresses. In this case, the velocity arrow increases in length with time because the car's displacement between adjacent positions increases in time. These features suggest the car is moving with a *positive velocity* and a *positive acceleration*. The velocity and acceleration are in the same direction. In terms of our earlier force discussion, imagine a force pulling on the car in the same direction it is moving: it speeds up.

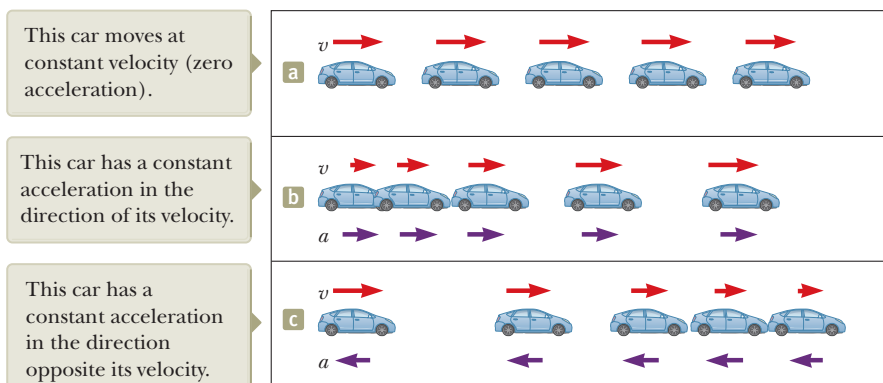


Figure 2.10 Motion diagrams of a car moving along a straight roadway in a single direction. The velocity at each instant is indicated by a red arrow, and the constant acceleration is indicated by a purple arrow.

In Figure 2.10c, we can tell that the car slows as it moves to the right because its displacement between adjacent images decreases with time. This case suggests the car moves to the right with a negative acceleration. The length of the velocity arrow decreases in time and eventually reaches zero. From this diagram, we see that the acceleration and velocity arrows are *not* in the same direction. The car is moving with a *positive velocity*, but with a *negative acceleration*. (This type of motion is exhibited by a car that skids to a stop after its brakes are applied.) The velocity and acceleration are in opposite directions. In terms of our earlier force discussion, imagine a force pulling on the car opposite to the direction it is moving: it slows down.

Each purple acceleration arrow in parts (b) and (c) of Figure 2.10 is the same length. Therefore, these diagrams represent motion of a *particle under constant acceleration*. This important analysis model will be discussed in the next section.

- Quick Quiz 2.5** Which one of the following statements is true? (a) If a car is traveling eastward, its acceleration must be eastward. (b) If a car is slowing down, its acceleration must be negative. (c) A particle with constant acceleration can never stop and stay stopped.

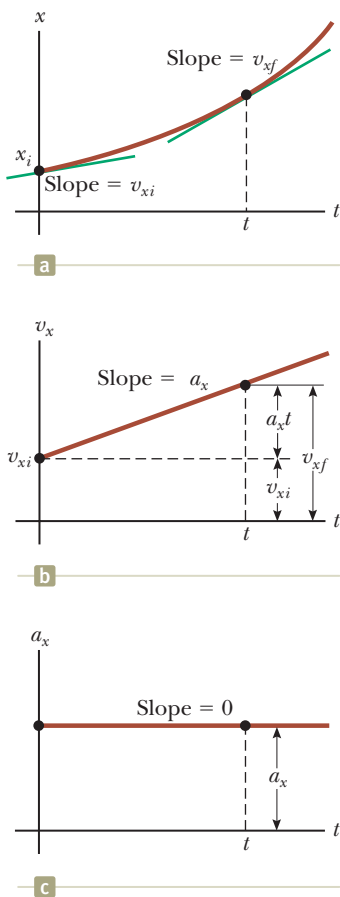


Figure 2.11 A particle under constant acceleration a_x moving along the x axis: (a) the position–time graph, (b) the velocity–time graph, and (c) the acceleration–time graph.

2.6 Analysis Model: Particle Under Constant Acceleration

If the acceleration of a particle varies in time, its motion can be complex and difficult to analyze. A very common and simple type of one-dimensional motion, however, is that in which the acceleration is constant. In such a case, the average acceleration $a_{x,\text{avg}}$ over any time interval is numerically equal to the instantaneous acceleration a_x at any instant within the interval, and the velocity changes at the same rate throughout the motion. This situation occurs often enough that we identify it as an analysis model: the **particle under constant acceleration**. In the discussion that follows, we generate several equations that describe the motion of a particle for this model.

If we replace $a_{x,\text{avg}}$ by a_x in Equation 2.9 and take $t_i = 0$ and t_f to be any later time t , we find that

$$a_x = \frac{v_{xf} - v_{xi}}{t - 0}$$

or

$$v_{xf} = v_{xi} + a_x t \quad (\text{for constant } a_x) \quad (2.13)$$

This powerful expression enables us to determine an object's velocity at *any* time t if we know the object's initial velocity v_{xi} and its (constant) acceleration a_x . A velocity–time graph for this constant-acceleration motion is shown in Figure 2.11b. The graph is a straight line, the slope of which is the acceleration a_x ; the (constant) slope is consistent with $a_x = dv_x/dt$ being a constant. Notice that the slope is positive, which indicates a positive acceleration. If the acceleration were negative, the slope of the line in Figure 2.11b would be negative. When the acceleration is constant, the graph of acceleration versus time (Fig. 2.11c) is a straight line having a slope of zero.

Because velocity at constant acceleration varies linearly in time according to Equation 2.13, we can express the average velocity in any time interval as the arithmetic mean of the initial velocity v_{xi} and the final velocity v_{xf} :

$$v_{x,\text{avg}} = \frac{v_{xi} + v_{xf}}{2} \quad (\text{for constant } a_x) \quad (2.14)$$

Notice that this expression for average velocity applies *only* in situations in which the acceleration is constant.

We can now use Equations 2.1, 2.2, and 2.14 to obtain the position of an object as a function of time. Recalling that Δx in Equation 2.2 represents $x_f - x_i$ and recognizing that $\Delta t = t_f - t_i = t - 0 = t$, we find that

$$x_f - x_i = v_{x,\text{avg}} t = \frac{1}{2}(v_{xi} + v_{xf})t$$

$$x_f = x_i + \frac{1}{2}(v_{xi} + v_{xf})t \quad (\text{for constant } a_x) \quad (2.15)$$

This equation provides the final position of the particle at time t in terms of the initial and final velocities.

We can obtain another useful expression for the position of a particle under constant acceleration by substituting Equation 2.13 into Equation 2.15:

$$x_f = x_i + \frac{1}{2}[v_{xi} + (v_{xi} + a_x t)]t$$

$$x_f = x_i + v_{xi}t + \frac{1}{2}a_x t^2 \quad (\text{for constant } a_x) \quad (2.16)$$

This equation provides the final position of the particle at time t in terms of the initial position, the initial velocity, and the constant acceleration.

The position–time graph for motion at constant (positive) acceleration shown in Figure 2.11a is obtained from Equation 2.16. Notice that the curve is a parabola. The slope of the tangent line to this curve at $t = 0$ equals the initial velocity v_{xi} , and the slope of the tangent line at any later time t equals the velocity v_{xf} at that time.

Finally, we can obtain an expression for the final velocity that does not contain time as a variable by substituting the value of t from Equation 2.13 into Equation 2.15:

$$x_f = x_i + \frac{1}{2}(v_{xi} + v_{xf})\left(\frac{v_{xf} - v_{xi}}{a_x}\right) = x_i + \frac{v_{xf}^2 - v_{xi}^2}{2a_x}$$

$$v_{xf}^2 = v_{xi}^2 + 2a_x(x_f - x_i) \quad (\text{for constant } a_x) \quad (2.17)$$

This equation provides the final velocity in terms of the initial velocity, the constant acceleration, and the position of the particle.

For motion at *zero* acceleration, we see from Equations 2.13 and 2.16 that

$$\left. \begin{aligned} v_{xf} &= v_{xi} = v_x \\ x_f &= x_i + v_x t \end{aligned} \right\} \text{ when } a_x = 0$$

That is, when the acceleration of a particle is zero, its velocity is constant and its position changes linearly with time. In terms of models, when the acceleration of a particle is zero, the particle under constant acceleration model reduces to the particle under constant velocity model (Section 2.3).

Equations 2.13 through 2.17 are **kinematic equations** that may be used to solve any problem involving a particle under constant acceleration in one dimension. These equations are listed together for convenience on page 38. The choice of which equation you use in a given situation depends on what you know beforehand. Sometimes it is necessary to use two of these equations to solve for two unknowns. You should recognize that the quantities that vary during the motion are position x_f , velocity v_{xf} , and time t .

You will gain a great deal of experience in the use of these equations by solving a number of exercises and problems. Many times you will discover that more than one method can be used to obtain a solution. Remember that these equations of kinematics *cannot* be used in a situation in which the acceleration varies with time. They can be used only when the acceleration is constant.

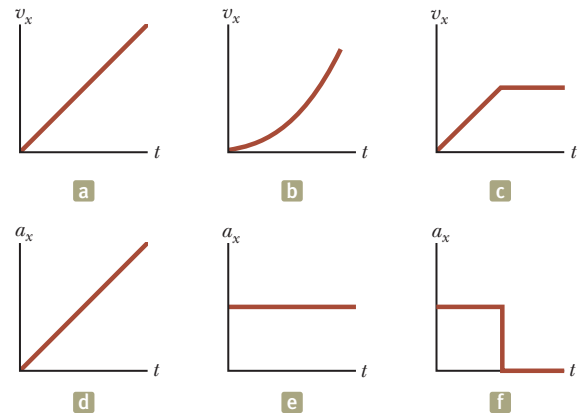
◀ Position as a function of velocity and time for the particle under constant acceleration model

◀ Position as a function of time for the particle under constant acceleration model

◀ Velocity as a function of position for the particle under constant acceleration model

Quick Quiz 2.6 In Figure 2.12, match each v_x-t graph on the top with the a_x-t graph on the bottom that best describes the motion.

Figure 2.12 (Quick Quiz 2.6) Parts (a), (b), and (c) are v_x-t graphs of objects in one-dimensional motion. The possible accelerations of each object as a function of time are shown in scrambled order in (d), (e), and (f).



Analysis Model Particle Under Constant Acceleration

Imagine a moving object that can be modeled as a particle. If it begins from position x_i and initial velocity v_{xi} and moves in a straight line with a constant acceleration a_x , its subsequent position and velocity are described by the following kinematic equations:

$$v_{xf} = v_{xi} + a_x t \quad (2.13)$$

$$v_{x,\text{avg}} = \frac{v_{xi} + v_{xf}}{2} \quad (2.14)$$

$$x_f = x_i + \frac{1}{2}(v_{xi} + v_{xf})t \quad (2.15)$$

$$x_f = x_i + v_{xi}t + \frac{1}{2}a_x t^2 \quad (2.16)$$

$$v_{xf}^2 = v_{xi}^2 + 2a_x(x_f - x_i) \quad (2.17)$$



Examples

- a car accelerating at a constant rate along a straight freeway
- a dropped object in the absence of air resistance (Section 2.7)
- an object on which a constant net force acts (Chapter 5)
- a charged particle in a uniform electric field (Chapter 23)

Example 2.7

Carrier Landing

AM

A jet lands on an aircraft carrier at a speed of 140 mi/h (≈ 63 m/s).

(A) What is its acceleration (assumed constant) if it stops in 2.0 s due to an arresting cable that snags the jet and brings it to a stop?

SOLUTION

You might have seen movies or television shows in which a jet lands on an aircraft carrier and is brought to rest surprisingly fast by an arresting cable. A careful reading of the problem reveals that in addition to being given the initial speed of 63 m/s, we also know that the final speed is zero. Because the acceleration of the jet is assumed constant, we model it as a *particle under constant acceleration*. We define our x axis as the direction of motion of the jet. Notice that we have no information about the change in position of the jet while it is slowing down.

2.7 continued

Equation 2.13 is the only equation in the particle under constant acceleration model that does not involve position, so we use it to find the acceleration of the jet, modeled as a particle:

$$\begin{aligned} a_x &= \frac{v_{xf} - v_{xi}}{t} \approx \frac{0 - 63 \text{ m/s}}{2.0 \text{ s}} \\ &= -32 \text{ m/s}^2 \end{aligned}$$

(B) If the jet touches down at position $x_i = 0$, what is its final position?

SOLUTION

Use Equation 2.15 to solve for the final position:

$$x_f = x_i + \frac{1}{2}(v_{xi} + v_{xf})t = 0 + \frac{1}{2}(63 \text{ m/s} + 0)(2.0 \text{ s}) = 63 \text{ m}$$

Given the size of aircraft carriers, a length of 63 m seems reasonable for stopping the jet. The idea of using arresting cables to slow down landing aircraft and enable them to land safely on ships originated at about the time of World War I. The cables are still a vital part of the operation of modern aircraft carriers.

WHAT IF? Suppose the jet lands on the deck of the aircraft carrier with a speed faster than 63 m/s but has the same acceleration due to the cable as that calculated in part (A). How will that change the answer to part (B)?

Answer If the jet is traveling faster at the beginning, it will stop farther away from its starting point, so the answer to part (B) should be larger. Mathematically, we see in Equation 2.15 that if v_{xi} is larger, then x_f will be larger.

Example 2.8 Watch Out for the Speed Limit!

AM

A car traveling at a constant speed of 45.0 m/s passes a trooper on a motorcycle hidden behind a billboard. One second after the speeding car passes the billboard, the trooper sets out from the billboard to catch the car, accelerating at a constant rate of 3.00 m/s². How long does it take the trooper to overtake the car?

SOLUTION

A pictorial representation (Fig. 2.13) helps clarify the sequence of events. The car is modeled as a *particle under constant velocity*, and the trooper is modeled as a *particle under constant acceleration*.

First, we write expressions for the position of each vehicle as a function of time. It is convenient to choose the position of the billboard as the origin and to set $t_{\text{trooper}} = 0$ as the time the trooper begins moving. At that instant, the car has already traveled a distance of 45.0 m from the billboard because it has traveled at a constant speed of $v_x = 45.0$ m/s for 1 s. Therefore, the initial position of the speeding car is $x_{\text{car}} = 45.0$ m.

Using the particle under constant velocity model, apply Equation 2.7 to give the car's position at any time t :

$$x_{\text{car}} = x_{\text{car}} + v_{x \text{ car}} t$$

A quick check shows that at $t = 0$, this expression gives the car's correct initial position when the trooper begins to move: $x_{\text{car}} = x_{\text{car}} = 45.0$ m.

The trooper starts from rest at $t_{\text{trooper}} = 0$ and accelerates at $a_x = 3.00$ m/s² away from the origin. Use Equation 2.16 to give her position at any time t :

$$\begin{aligned} x_f &= x_i + v_{xi}t + \frac{1}{2}a_x t^2 \\ x_{\text{trooper}} &= 0 + (0)t + \frac{1}{2}a_x t^2 = \frac{1}{2}a_x t^2 \end{aligned}$$

Set the positions of the car and trooper equal to represent the trooper overtaking the car at position ©:

$$\begin{aligned} x_{\text{trooper}} &= x_{\text{car}} \\ \frac{1}{2}a_x t^2 &= x_{\text{car}} + v_{x \text{ car}} t \end{aligned}$$

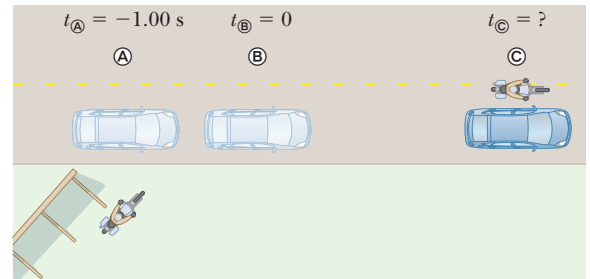


Figure 2.13 (Example 2.8) A speeding car passes a hidden trooper.

continued

2.8 continued

Rearrange to give a quadratic equation:

$$\frac{1}{2}a_x t^2 - v_{x\text{car}} t - x_{\text{tr}} = 0$$

Solve the quadratic equation for the time at which the trooper catches the car (for help in solving quadratic equations, see Appendix B.2.):

$$t = \frac{v_{x\text{car}} \pm \sqrt{v_{x\text{car}}^2 + 2a_x x_{\text{tr}}}}{a_x}$$

$$(1) \quad t = \frac{v_{x\text{car}}}{a_x} \pm \sqrt{\frac{v_{x\text{car}}^2}{a_x^2} + \frac{2x_{\text{tr}}}{a_x}}$$


Evaluate the solution, choosing the positive root because that is the only choice consistent with a time $t > 0$:

$$t = \frac{45.0 \text{ m/s}}{3.00 \text{ m/s}^2} + \sqrt{\frac{(45.0 \text{ m/s})^2}{(3.00 \text{ m/s}^2)^2} + \frac{2(45.0 \text{ m})}{3.00 \text{ m/s}^2}} = 31.0 \text{ s}$$

Why didn't we choose $t = 0$ as the time at which the car passes the trooper? If we did so, we would not be able to use the particle under constant acceleration model for the trooper. Her acceleration would be zero for the first second and then 3.00 m/s^2 for the remaining time. By defining the time $t = 0$ as when the trooper begins moving, we can use the particle under constant acceleration model for her movement for all positive times.

WHAT IF? What if the trooper had a more powerful motorcycle with a larger acceleration? How would that change the time at which the trooper catches the car?

Answer If the motorcycle has a larger acceleration, the trooper should catch up to the car sooner, so the answer for the time should be less than 31 s. Because all terms on the right side of Equation (1) have the acceleration a_x in the denominator, we see symbolically that increasing the acceleration will decrease the time at which the trooper catches the car.



Georgios Kollias/Shutterstock.com

Galileo Galilei

Italian physicist and astronomer
(1564–1642)

Galileo formulated the laws that govern the motion of objects in free fall and made many other significant discoveries in physics and astronomy. Galileo publicly defended Nicolaus Copernicus's assertion that the Sun is at the center of the Universe (the heliocentric system). He published *Dialogue Concerning Two New World Systems* to support the Copernican model, a view that the Catholic Church declared to be heretical.

2.7 Freely Falling Objects

It is well known that, in the absence of air resistance, all objects dropped near the Earth's surface fall toward the Earth with the same constant acceleration under the influence of the Earth's gravity. It was not until about 1600 that this conclusion was accepted. Before that time, the teachings of the Greek philosopher Aristotle (384–322 BC) had held that heavier objects fall faster than lighter ones.

The Italian Galileo Galilei (1564–1642) originated our present-day ideas concerning falling objects. There is a legend that he demonstrated the behavior of falling objects by observing that two different weights dropped simultaneously from the Leaning Tower of Pisa hit the ground at approximately the same time. Although there is some doubt that he carried out this particular experiment, it is well established that Galileo performed many experiments on objects moving on inclined planes. In his experiments, he rolled balls down a slight incline and measured the distances they covered in successive time intervals. The purpose of the incline was to reduce the acceleration, which made it possible for him to make accurate measurements of the time intervals. By gradually increasing the slope of the incline, he was finally able to draw conclusions about freely falling objects because a freely falling ball is equivalent to a ball moving down a vertical incline.

You might want to try the following experiment. Simultaneously drop a coin and a crumpled-up piece of paper from the same height. If the effects of air resistance are negligible, both will have the same motion and will hit the floor at the same time. In the idealized case, in which air resistance is absent, such motion is referred

to as *free-fall* motion. If this same experiment could be conducted in a vacuum, in which air resistance is truly negligible, the paper and the coin would fall with the same acceleration even when the paper is not crumpled. On August 2, 1971, astronaut David Scott conducted such a demonstration on the Moon. He simultaneously released a hammer and a feather, and the two objects fell together to the lunar surface. This simple demonstration surely would have pleased Galileo!

When we use the expression *freely falling object*, we do not necessarily refer to an object dropped from rest. A freely falling object is any object moving freely under the influence of gravity alone, regardless of its initial motion. Objects thrown upward or downward and those released from rest are all falling freely once they are released. Any freely falling object experiences an acceleration directed *downward*, regardless of its initial motion.

We shall denote the magnitude of the *free-fall acceleration*, also called the *acceleration due to gravity*, by the symbol g . The value of g decreases with increasing altitude above the Earth's surface. Furthermore, slight variations in g occur with changes in latitude. At the Earth's surface, the value of g is approximately 9.80 m/s^2 . Unless stated otherwise, we shall use this value for g when performing calculations. For making quick estimates, use $g = 10 \text{ m/s}^2$.

If we neglect air resistance and assume the free-fall acceleration does not vary with altitude over short vertical distances, the motion of a freely falling object moving vertically is equivalent to the motion of a particle under constant acceleration in one dimension. Therefore, the equations developed in Section 2.6 for the particle under constant acceleration model can be applied. The only modification for freely falling objects that we need to make in these equations is to note that the motion is in the vertical direction (the y direction) rather than in the horizontal direction (x) and that the acceleration is downward and has a magnitude of 9.80 m/s^2 . Therefore, we choose $a_y = -g = -9.80 \text{ m/s}^2$, where the negative sign means that the acceleration of a freely falling object is downward. In Chapter 13, we shall study how to deal with variations in g with altitude.

- Quick Quiz 2.7** Consider the following choices: (a) increases, (b) decreases, (c) increases and then decreases, (d) decreases and then increases, (e) remains the same. From these choices, select what happens to (i) the acceleration and (ii) the speed of a ball after it is thrown upward into the air.

Pitfall Prevention 2.6

g and g Be sure not to confuse the italic symbol g for free-fall acceleration with the nonitalic symbol g used as the abbreviation for the unit gram.

Pitfall Prevention 2.7

The Sign of g Keep in mind that g is a *positive number*. It is tempting to substitute -9.80 m/s^2 for g , but resist the temptation. Downward gravitational acceleration is indicated explicitly by stating the acceleration as $a_y = -g$.

Pitfall Prevention 2.8

Acceleration at the Top of the Motion A common misconception is that the acceleration of a projectile at the top of its trajectory is zero. Although the velocity at the top of the motion of an object thrown upward momentarily goes to zero, *the acceleration is still that due to gravity* at this point. If the velocity and acceleration were both zero, the projectile would stay at the top.

Conceptual Example 2.9

The Daring Skydivers

A skydiver jumps out of a hovering helicopter. A few seconds later, another skydiver jumps out, and they both fall along the same vertical line. Ignore air resistance so that both skydivers fall with the same acceleration. Does the difference in their speeds stay the same throughout the fall? Does the vertical distance between them stay the same throughout the fall?

SOLUTION

At any given instant, the speeds of the skydivers are different because one had a head start. In any time interval Δt after this instant, however, the two skydivers increase their speeds by the same amount because they have the same acceleration. Therefore, the difference in their speeds remains the same throughout the fall.

The first jumper always has a greater speed than the second. Therefore, in a given time interval, the first skydiver covers a greater distance than the second. Consequently, the separation distance between them increases.

Example 2.10 Not a Bad Throw for a Rookie!**AM**

A stone thrown from the top of a building is given an initial velocity of 20.0 m/s straight upward. The stone is launched 50.0 m above the ground, and the stone just misses the edge of the roof on its way down as shown in Figure 2.14.

(A) Using $t_{\text{A}} = 0$ as the time the stone leaves the thrower's hand at position **A**, determine the time at which the stone reaches its maximum height.

SOLUTION

You most likely have experience with dropping objects or throwing them upward and watching them fall, so this problem should describe a familiar experience. To simulate this situation, toss a small object upward and notice the time interval required for it to fall to the floor. Now imagine throwing that object upward from the roof of a building. Because the stone is in free fall, it is modeled as a *particle under constant acceleration* due to gravity.

Recognize that the initial velocity is positive because the stone is launched upward. The velocity will change sign after the stone reaches its highest point, but the acceleration of the stone will *always* be downward so that it will always have a negative value. Choose an initial point just after the stone leaves the person's hand and a final point at the top of its flight.

Use Equation 2.13 to calculate the time at which the stone reaches its maximum height:

Substitute numerical values:

$$v_{yf} = v_{yi} + a_y t \rightarrow t = \frac{v_{yf} - v_{yi}}{a_y}$$

$$t = t_{\text{B}} = \frac{0 - 20.0 \text{ m/s}}{-9.80 \text{ m/s}^2} = 2.04 \text{ s}$$

(B) Find the maximum height of the stone.

SOLUTION

As in part (A), choose the initial and final points at the beginning and the end of the upward flight.

Set $y_{\text{A}} = 0$ and substitute the time from part (A) into Equation 2.16 to find the maximum height:

$$y_{\text{max}} = y_{\text{B}} = y_{\text{A}} + v_{x\text{A}} t + \frac{1}{2} a_y t^2$$

$$y_{\text{B}} = 0 + (20.0 \text{ m/s})(2.04 \text{ s}) + \frac{1}{2}(-9.80 \text{ m/s}^2)(2.04 \text{ s})^2 = 20.4 \text{ m}$$

(C) Determine the velocity of the stone when it returns to the height from which it was thrown.

SOLUTION

Choose the initial point where the stone is launched and the final point when it passes this position coming down.

Substitute known values into Equation 2.17:

$$v_{y\text{C}}^2 = v_{y\text{A}}^2 + 2a_y(y_{\text{C}} - y_{\text{A}})$$

$$v_{y\text{C}}^2 = (20.0 \text{ m/s})^2 + 2(-9.80 \text{ m/s}^2)(0 - 0) = 400 \text{ m}^2/\text{s}^2$$

$$v_{y\text{C}} = -20.0 \text{ m/s}$$

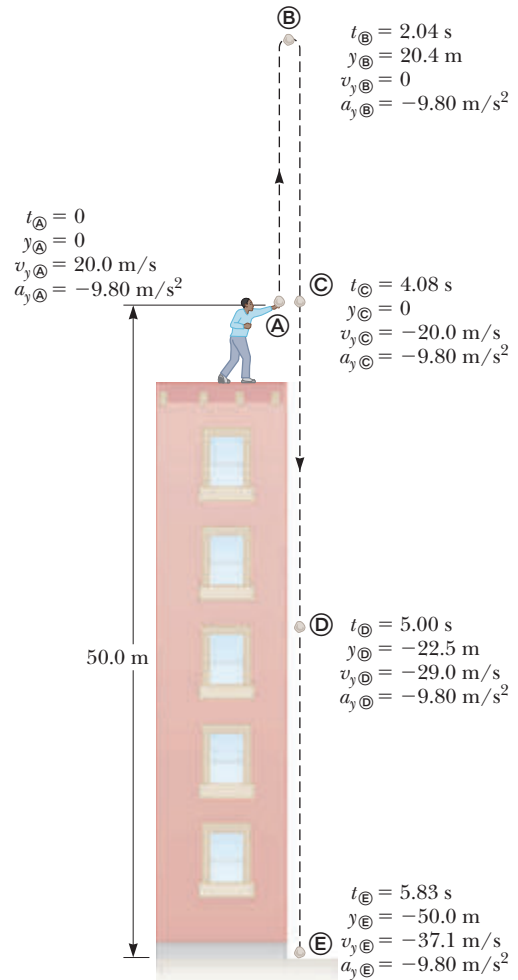


Figure 2.14 (Example 2.10) Position, velocity, and acceleration values at various times for a freely falling stone thrown initially upward with a velocity $v_{yi} = 20.0 \text{ m/s}$. Many of the quantities in the labels for points in the motion of the stone are calculated in the example. Can you verify the other values that are not?

► 2.10 continued

When taking the square root, we could choose either a positive or a negative root. We choose the negative root because we know that the stone is moving downward at point ©. The velocity of the stone when it arrives back at its original height is equal in magnitude to its initial velocity but is opposite in direction.

(D) Find the velocity and position of the stone at $t = 5.00$ s.

SOLUTION

Choose the initial point just after the throw and the final point 5.00 s later.

Calculate the velocity at © from Equation 2.13: $v_{y©} = v_{yⓐ} + a_y t = 20.0 \text{ m/s} + (-9.80 \text{ m/s}^2)(5.00 \text{ s}) = -29.0 \text{ m/s}$

Use Equation 2.16 to find the position of the stone at $t_{©} = 5.00$ s:

$$y_{©} = y_{ⓐ} + v_{yⓐ} t + \frac{1}{2} a_y t^2$$

$$= 0 + (20.0 \text{ m/s})(5.00 \text{ s}) + \frac{1}{2}(-9.80 \text{ m/s}^2)(5.00 \text{ s})^2$$

$$= -22.5 \text{ m}$$

The choice of the time defined as $t = 0$ is arbitrary and up to you to select as the problem solver. As an example of this arbitrariness, choose $t = 0$ as the time at which the stone is at the highest point in its motion. Then solve parts (C) and (D) again using this new initial instant and notice that your answers are the same as those above.

WHAT IF? What if the throw were from 30.0 m above the ground instead of 50.0 m? Which answers in parts (A) to (D) would change?

Answer None of the answers would change. All the motion takes place in the air during the first 5.00 s. (Notice that even for a throw from 30.0 m, the stone is above the ground at $t = 5.00$ s.) Therefore, the height of the throw is not an issue. Mathematically, if we look back over our calculations, we see that we never entered the height of the throw into any equation.

2.8 Kinematic Equations Derived from Calculus

This section assumes the reader is familiar with the techniques of integral calculus. If you have not yet studied integration in your calculus course, you should skip this section or cover it after you become familiar with integration.

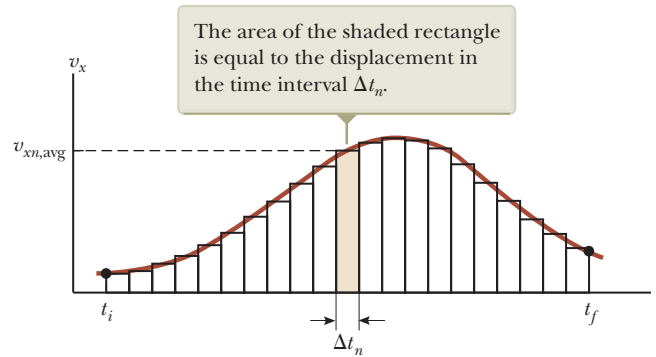
The velocity of a particle moving in a straight line can be obtained if its position as a function of time is known. Mathematically, the velocity equals the derivative of the position with respect to time. It is also possible to find the position of a particle if its velocity is known as a function of time. In calculus, the procedure used to perform this task is referred to either as *integration* or as finding the *antiderivative*. Graphically, it is equivalent to finding the area under a curve.

Suppose the v_x - t graph for a particle moving along the x axis is as shown in Figure 2.15 on page 44. Let us divide the time interval $t_f - t_i$ into many small intervals, each of duration Δt_n . From the definition of average velocity, we see that the displacement of the particle during any small interval, such as the one shaded in Figure 2.15, is given by $\Delta x_n = v_{xn, \text{avg}} \Delta t_n$, where $v_{xn, \text{avg}}$ is the average velocity in that interval. Therefore, the displacement during this small interval is simply the area of the shaded rectangle in Figure 2.15. The total displacement for the interval $t_f - t_i$ is the sum of the areas of all the rectangles from t_i to t_f :

$$\Delta x = \sum_n v_{xn, \text{avg}} \Delta t_n$$

where the symbol Σ (uppercase Greek sigma) signifies a sum over all terms, that is, over all values of n . Now, as the intervals are made smaller and smaller, the number of terms in the sum increases and the sum approaches a value equal to the area

Figure 2.15 Velocity versus time for a particle moving along the x axis. The total area under the curve is the total displacement of the particle.



under the curve in the velocity–time graph. Therefore, in the limit $n \rightarrow \infty$, or $\Delta t_n \rightarrow 0$, the displacement is

$$\Delta x = \lim_{\Delta t_n \rightarrow 0} \sum_n v_{xn,avg} \Delta t_n \quad (2.18)$$

If we know the v_x – t graph for motion along a straight line, we can obtain the displacement during any time interval by measuring the area under the curve corresponding to that time interval.

The limit of the sum shown in Equation 2.18 is called a **definite integral** and is written

$$\lim_{\Delta t_n \rightarrow 0} \sum_n v_{xn,avg} \Delta t_n = \int_{t_i}^{t_f} v_x(t) dt \quad (2.19)$$

where $v_x(t)$ denotes the velocity at any time t . If the explicit functional form of $v_x(t)$ is known and the limits are given, the integral can be evaluated. Sometimes the v_x – t graph for a moving particle has a shape much simpler than that shown in Figure 2.15. For example, suppose an object is described with the particle under constant velocity model. In this case, the v_x – t graph is a horizontal line as in Figure 2.16 and the displacement of the particle during the time interval Δt is simply the area of the shaded rectangle:

$$\Delta x = v_{xi} \Delta t \quad (\text{when } v_x = v_{xi} = \text{constant})$$

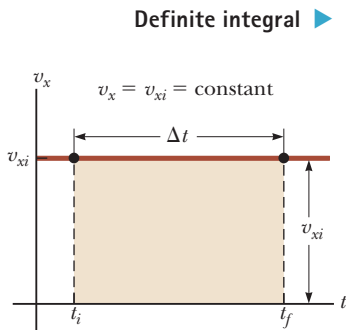


Figure 2.16 The velocity–time curve for a particle moving with constant velocity v_{xi} . The displacement of the particle during the time interval $t_f - t_i$ is equal to the area of the shaded rectangle.

Kinematic Equations

We now use the defining equations for acceleration and velocity to derive two of our kinematic equations, Equations 2.13 and 2.16.

The defining equation for acceleration (Eq. 2.10),

$$a_x = \frac{dv_x}{dt}$$

may be written as $dv_x = a_x dt$ or, in terms of an integral (or antiderivative), as

$$v_{xf} - v_{xi} = \int_0^t a_x dt$$

For the special case in which the acceleration is constant, a_x can be removed from the integral to give

$$v_{xf} - v_{xi} = a_x \int_0^t dt = a_x(t - 0) = a_x t \quad (2.20)$$

which is Equation 2.13 in the particle under constant acceleration model.

Now let us consider the defining equation for velocity (Eq. 2.5):

$$v_x = \frac{dx}{dt}$$

We can write this equation as $dx = v_x dt$ or in integral form as

$$x_f - x_i = \int_0^t v_x dt$$

Because $v_x = v_{xf} = v_{xi} + a_x t$, this expression becomes

$$x_f - x_i = \int_0^t (v_{xi} + a_x t) dt = \int_0^t v_{xi} dt + a_x \int_0^t t dt = v_{xi}(t - 0) + a_x \left(\frac{t^2}{2} - 0 \right)$$

$$x_f - x_i = v_{xi}t + \frac{1}{2}a_x t^2$$

which is Equation 2.16 in the particle under constant acceleration model.

Besides what you might expect to learn about physics concepts, a very valuable skill you should hope to take away from your physics course is the ability to solve complicated problems. The way physicists approach complex situations and break them into manageable pieces is extremely useful. The following is a general problem-solving strategy to guide you through the steps. To help you remember the steps of the strategy, they are *Conceptualize*, *Categorize*, *Analyze*, and *Finalize*.

GENERAL PROBLEM-SOLVING STRATEGY

Conceptualize

- The first things to do when approaching a problem are to *think about* and *understand* the situation. Study carefully any representations of the information (for example, diagrams, graphs, tables, or photographs) that accompany the problem. Imagine a movie, running in your mind, of what happens in the problem.
- If a pictorial representation is not provided, you should almost always make a quick drawing of the situation. Indicate any known values, perhaps in a table or directly on your sketch.
- Now focus on what algebraic or numerical information is given in the problem. Carefully read the problem statement, looking for key phrases such as “starts from rest” ($v_i = 0$), “stops” ($v_f = 0$), or “falls freely” ($a_y = -g = -9.80 \text{ m/s}^2$).
- Now focus on the expected result of solving the problem. Exactly what is the question asking? Will the final result be numerical or algebraic? Do you know what units to expect?
- Don’t forget to incorporate information from your own experiences and common sense. What should a reasonable answer look like? For example, you wouldn’t expect to calculate the speed of an automobile to be $5 \times 10^6 \text{ m/s}$.

Categorize

- Once you have a good idea of what the problem is about, you need to *simplify* the problem. Remove

the details that are not important to the solution.

For example, model a moving object as a particle. If appropriate, ignore air resistance or friction between a sliding object and a surface.

- Once the problem is simplified, it is important to *categorize* the problem. Is it a simple *substitution problem* such that numbers can be substituted into a simple equation or a definition? If so, the problem is likely to be finished when this substitution is done. If not, you face what we call an *analysis problem*: the situation must be analyzed more deeply to generate an appropriate equation and reach a solution.
- If it is an analysis problem, it needs to be categorized further. Have you seen this type of problem before? Does it fall into the growing list of types of problems that you have solved previously? If so, identify any analysis model(s) appropriate for the problem to prepare for the Analyze step below. We saw the first three analysis models in this chapter: the particle under constant velocity, the particle under constant speed, and the particle under constant acceleration. Being able to classify a problem with an analysis model can make it much easier to lay out a plan to solve it. For example, if your simplification shows that the problem can be treated as a particle under constant acceleration and you have already solved such a problem (such as the examples in Section 2.6), the solution to the present problem follows a similar pattern.

continued

Analyze

- Now you must analyze the problem and strive for a mathematical solution. Because you have already categorized the problem and identified an analysis model, it should not be too difficult to select relevant equations that apply to the type of situation in the problem. For example, if the problem involves a particle under constant acceleration, Equations 2.13 to 2.17 are relevant.
- Use algebra (and calculus, if necessary) to solve symbolically for the unknown variable in terms of what is given. Finally, substitute in the appropriate numbers, calculate the result, and round it to the proper number of significant figures.

Finalize

- Examine your numerical answer. Does it have the correct units? Does it meet your expectations from your conceptualization of the problem? What about the algebraic form of the result? Does it make sense? Examine the variables in the problem to see whether the answer would change in a physically meaningful way if the variables were drastically increased or decreased or even became zero. Looking at limiting cases to see whether they yield expected values is a very useful way to make sure that you are obtaining reasonable results.

- Think about how this problem compared with others you have solved. How was it similar? In what critical ways did it differ? Why was this problem assigned? Can you figure out what you have learned by doing it? If it is a new category of problem, be sure you understand it so that you can use it as a model for solving similar problems in the future.

When solving complex problems, you may need to identify a series of subproblems and apply the problem-solving strategy to each. For simple problems, you probably don't need this strategy. When you are trying to solve a problem and you don't know what to do next, however, remember the steps in the strategy and use them as a guide.

For practice, it would be useful for you to revisit the worked examples in this chapter and identify the *Conceptualize*, *Categorize*, *Analyze*, and *Finalize* steps. In the rest of this book, we will label these steps explicitly in the worked examples. Many chapters in this book include a section labeled Problem-Solving Strategy that should help you through the rough spots. These sections are organized according to the General Problem-Solving Strategy outlined above and are tailored to the specific types of problems addressed in that chapter.

To clarify how this Strategy works, we repeat Example 2.7 below with the particular steps of the Strategy identified.

When you **Conceptualize** a problem, try to understand the situation that is presented in the problem statement. Study carefully any representations of the information (for example, diagrams, graphs, tables, or photographs) that accompany the problem. Imagine a movie, running in your mind, of what happens in the problem.

Simplify the problem. Remove the details that are not important to the solution. Then **Categorize** the problem. Is it a simple substitution problem such that numbers can be substituted into a simple equation or a definition? If not, you face an analysis problem. In this case, identify the appropriate analysis model.

Example 2.7**Carrier Landing****AM**

A jet lands on an aircraft carrier at a speed of 140 mi/h (≈ 63 m/s).

(A) What is its acceleration (assumed constant) if it stops in 2.0 s due to an arresting cable that snags the jet and brings it to a stop?

SOLUTION**Conceptualize**

You might have seen movies or television shows in which a jet lands on an aircraft carrier and is brought to rest surprisingly fast by an arresting cable. A careful reading of the problem reveals that in addition to being given the initial speed of 63 m/s, we also know that the final speed is zero.

Categorize

Because the acceleration of the jet is assumed constant, we model it as a *particle under constant acceleration*.

2.7 continued

Analyze

We define our x axis as the direction of motion of the jet. Notice that we have no information about the change in position of the jet while it is slowing down.

Equation 2.13 is the only equation in the particle under constant acceleration model that does not involve position, so we use it to find the acceleration of the jet, modeled as a particle:

$$\begin{aligned} a_x &= \frac{v_{xf} - v_{xi}}{t} = \frac{0 - 63 \text{ m/s}}{2.0 \text{ s}} \\ &= -32 \text{ m/s}^2 \end{aligned}$$

(B) If the jet touches down at position $x_i = 0$, what is its final position?

SOLUTION

Use Equation 2.15 to solve for the final position:

$$x_f = x_i + \frac{1}{2}(v_{xi} + v_{xf})t = 0 + \frac{1}{2}(63 \text{ m/s} + 0)(2.0 \text{ s}) = 63 \text{ m}$$

Finalize

Given the size of aircraft carriers, a length of 63 m seems reasonable for stopping the jet. The idea of using arresting cables to slow down landing aircraft and enable them to land safely on ships originated at about the time of World War I. The cables are still a vital part of the operation of modern aircraft carriers.

WHAT IF? Suppose the jet lands on the deck of the aircraft carrier with a speed higher than 63 m/s but has the same acceleration due to the cable as that calculated in part (A). How will that change the answer to part (B)?

Answer If the jet is traveling faster at the beginning, it will stop farther away from its starting point, so the answer to part (B) should be larger. Mathematically, we see in Equation 2.15 that if v_{xi} is larger, x_f will be larger.

Now **Analyze** the problem. Select relevant equations from the analysis model. Solve symbolically for the unknown variable in terms of what is given. Substitute in the appropriate numbers, calculate the result, and round it to the proper number of significant figures.

Finalize the problem. Examine the numerical answer. Does it have the correct units? Does it meet your expectations from your conceptualization of the problem? Does the answer make sense? What about the algebraic form of the result? Examine the variables in the problem to see whether the answer would change in a physically meaningful way if the variables were drastically increased or decreased or even became zero.

What If? questions will appear in many examples in the text, and offer a variation on the situation just explored. This feature encourages you to think about the results of the example and assists in conceptual understanding of the principles.

Summary

Definitions

When a particle moves along the x axis from some initial position x_i to some final position x_f , its **displacement** is

$$\Delta x \equiv x_f - x_i \quad (2.1)$$

The **average velocity** of a particle during some time interval is the displacement Δx divided by the time interval Δt during which that displacement occurs:

$$v_{x,\text{avg}} \equiv \frac{\Delta x}{\Delta t} \quad (2.2)$$

The **average speed** of a particle is equal to the ratio of the total distance it travels to the total time interval during which it travels that distance:

$$v_{\text{avg}} \equiv \frac{d}{\Delta t} \quad (2.3)$$

continued

The **instantaneous velocity** of a particle is defined as the limit of the ratio $\Delta x/\Delta t$ as Δt approaches zero. By definition, this limit equals the derivative of x with respect to t , or the time rate of change of the position:

$$v_x \equiv \lim_{\Delta t \rightarrow 0} \frac{\Delta x}{\Delta t} = \frac{dx}{dt} \quad (2.5)$$

The **instantaneous speed** of a particle is equal to the magnitude of its instantaneous velocity.

The **average acceleration** of a particle is defined as the ratio of the change in its velocity Δv_x divided by the time interval Δt during which that change occurs:

$$a_{x,\text{avg}} \equiv \frac{\Delta v_x}{\Delta t} = \frac{v_{xf} - v_{xi}}{t_f - t_i} \quad (2.9)$$

The **instantaneous acceleration** is equal to the limit of the ratio $\Delta v_x/\Delta t$ as Δt approaches 0. By definition, this limit equals the derivative of v_x with respect to t , or the time rate of change of the velocity:

$$a_x \equiv \lim_{\Delta t \rightarrow 0} \frac{\Delta v_x}{\Delta t} = \frac{dv_x}{dt} \quad (2.10)$$

Concepts and Principles

When an object's velocity and acceleration are in the same direction, the object is speeding up. On the other hand, when the object's velocity and acceleration are in opposite directions, the object is slowing down. Remembering that $F_x \propto a_x$ is a useful way to identify the direction of the acceleration by associating it with a force.

An object falling freely in the presence of the Earth's gravity experiences free-fall acceleration directed toward the center of the Earth. If air resistance is neglected, if the motion occurs near the surface of the Earth, and if the range of the motion is small compared with the Earth's radius, the free-fall acceleration $a_y = -g$ is constant over the range of motion, where g is equal to 9.80 m/s^2 .

Complicated problems are best approached in an organized manner. Recall and apply the *Conceptualize*, *Categorize*, *Analyze*, and *Finalize* steps of the **General Problem-Solving Strategy** when you need them.

An important aid to problem solving is the use of **analysis models**. Analysis models are situations that we have seen in previous problems. Each analysis model has one or more equations associated with it. When solving a new problem, identify the analysis model that corresponds to the problem. The model will tell you which equations to use. The first three analysis models introduced in this chapter are summarized below.

Analysis Models for Problem-Solving

Particle Under Constant Velocity. If a particle moves in a straight line with a constant speed v_x , its constant velocity is given by

$$v_x = \frac{\Delta x}{\Delta t} \quad (2.6)$$

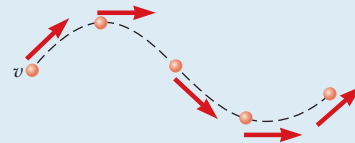
and its position is given by

$$x_f = x_i + v_x t \quad (2.7)$$



Particle Under Constant Speed. If a particle moves a distance d along a curved or straight path with a constant speed, its constant speed is given by

$$v = \frac{d}{\Delta t} \quad (2.8)$$



Particle Under Constant Acceleration. If a particle moves in a straight line with a constant acceleration a_x , its motion is described by the kinematic equations:

$$v_{xf} = v_{xi} + a_x t \quad (2.13)$$

$$v_{x,\text{avg}} = \frac{v_{xi} + v_{xf}}{2} \quad (2.14)$$

$$x_f = x_i + \frac{1}{2}(v_{xi} + v_{xf})t \quad (2.15)$$

$$x_f = x_i + v_{xi}t + \frac{1}{2}a_x t^2 \quad (2.16)$$

$$v_{xf}^2 = v_{xi}^2 + 2a_x(x_f - x_i) \quad (2.17)$$



Objective Questions

1. denotes answer available in *Student Solutions Manual/Study Guide*

1. One drop of oil falls straight down onto the road from the engine of a moving car every 5 s. Figure OQ2.1 shows the pattern of the drops left behind on the pavement. What is the average speed of the car over this section of its motion? (a) 20 m/s (b) 24 m/s (c) 30 m/s (d) 100 m/s (e) 120 m/s




Figure OQ2.1

2. A racing car starts from rest at $t = 0$ and reaches a final speed v at time t . If the acceleration of the car is constant during this time, which of the following statements are true? (a) The car travels a distance vt . (b) The average speed of the car is $v/2$. (c) The magnitude of the acceleration of the car is v/t . (d) The velocity of the car remains constant. (e) None of statements (a) through (d) is true.
3. A juggler throws a bowling pin straight up in the air. After the pin leaves his hand and while it is in the air, which statement is true? (a) The velocity of the pin is always in the same direction as its acceleration. (b) The velocity of the pin is never in the same direction as its acceleration. (c) The acceleration of the pin is zero. (d) The velocity of the pin is opposite its acceleration on the way up. (e) The velocity of the pin is in the same direction as its acceleration on the way up.
4. When applying the equations of kinematics for an object moving in one dimension, which of the following statements *must* be true? (a) The velocity of the object must remain constant. (b) The acceleration of the object must remain constant. (c) The velocity of the object must increase with time. (d) The position of the object must increase with time. (e) The velocity of the object must always be in the same direction as its acceleration.
5. A cannon shell is fired straight up from the ground at an initial speed of 225 m/s. After how much time is the shell at a height of 6.20×10^2 m above the ground and moving downward? (a) 2.96 s (b) 17.3 s (c) 25.4 s (d) 33.6 s (e) 43.0 s
6. An arrow is shot straight up in the air at an initial speed of 15.0 m/s. After how much time is the arrow moving downward at a speed of 8.00 m/s? (a) 0.714 s (b) 1.24 s (c) 1.87 s (d) 2.35 s (e) 3.22 s
7. When the pilot reverses the propeller in a boat moving north, the boat moves with an acceleration directed south. Assume the acceleration of the boat remains constant in magnitude and direction. What happens to the boat? (a) It eventually stops and remains stopped. (b) It eventually stops and then speeds up in the forward direction. (c) It eventually stops and then speeds up in the reverse direction. (d) It never stops but loses speed more and more slowly forever. (e) It never stops but continues to speed up in the forward direction.
8. A rock is thrown downward from the top of a 40.0-m-tall tower with an initial speed of 12 m/s. Assuming negligible air resistance, what is the speed of the rock just before hitting the ground? (a) 28 m/s (b) 30 m/s (c) 56 m/s (d) 784 m/s (e) More information is needed.
9. A skateboarder starts from rest and moves down a hill with constant acceleration in a straight line, traveling for 6 s. In a second trial, he starts from rest and moves along the same straight line with the same acceleration for only 2 s. How does his displacement from his starting point in this second trial compare with that from the first trial? (a) one-third as large (b) three times larger (c) one-ninth as large (d) nine times larger (e) $1/\sqrt{3}$ times as large
10. On another planet, a marble is released from rest at the top of a high cliff. It falls 4.00 m in the first 1 s of its motion. Through what additional distance does it fall in the next 1 s? (a) 4.00 m (b) 8.00 m (c) 12.0 m (d) 16.0 m (e) 20.0 m
11. As an object moves along the x axis, many measurements are made of its position, enough to generate a smooth, accurate graph of x versus t . Which of the following quantities for the object *cannot* be obtained from this graph *alone*? (a) the velocity at any instant (b) the acceleration at any instant (c) the displacement during some time interval (d) the average velocity during some time interval (e) the speed at any instant
12. A pebble is dropped from rest from the top of a tall cliff and falls 4.9 m after 1.0 s has elapsed. How much farther does it drop in the next 2.0 s? (a) 9.8 m (b) 19.6 m (c) 39 m (d) 44 m (e) none of the above
13. A student at the top of a building of height h throws one ball upward with a speed of v_i and then throws a second ball downward with the same initial speed v_i . Just before it reaches the ground, is the final speed of the ball thrown upward (a) larger, (b) smaller, or (c) the same in magnitude, compared with the final speed of the ball thrown downward?
14. You drop a ball from a window located on an upper floor of a building. It strikes the ground with speed v . You now repeat the drop, but your friend down on the ground throws another ball upward at the same speed v , releasing her ball at the same moment that you drop yours from the window. At some location, the balls pass each other. Is this location (a) *at* the halfway point between window and ground, (b) *above* this point, or (c) *below* this point?
15. A pebble is released from rest at a certain height and falls freely, reaching an impact speed of 4 m/s at the floor. Next, the pebble is thrown down with an initial speed of 3 m/s from the same height. What is its speed at the floor? (a) 4 m/s (b) 5 m/s (c) 6 m/s (d) 7 m/s (e) 8 m/s

16. A ball is thrown straight up in the air. For which situation are both the instantaneous velocity and the acceleration zero? (a) on the way up (b) at the top of its flight path (c) on the way down (d) halfway up and halfway down (e) none of the above

17. A hard rubber ball, not affected by air resistance in its motion, is tossed upward from shoulder height, falls to the sidewalk, rebounds to a smaller maximum height, and is caught on its way down again. This motion is represented in Figure OQ2.17, where the successive positions of the ball **A** through **E** are not equally spaced in time. At point **D** the center of the ball is at its lowest point in the motion. The motion of the ball is along a straight, vertical line, but the diagram shows successive positions offset to the right to avoid overlapping. Choose the positive y direction to be upward. (a) Rank the situations **A** through **E** according to the speed of the ball $|v_y|$ at each point, with the largest speed first. (b) Rank the same situations according to the acceleration a_y of the ball at each point. (In both rankings, remember that zero is greater than a negative value. If two values are equal, show that they are equal in your ranking.)

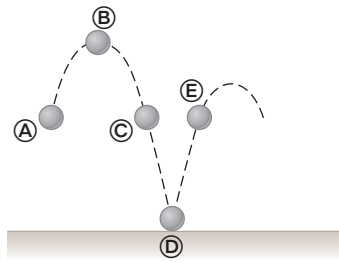


Figure OQ2.17

18. Each of the strobe photographs (a), (b), and (c) in Figure OQ2.18 was taken of a single disk moving toward the right, which we take as the positive direction. Within each photograph, the time interval between images is constant. (i) Which photograph shows motion with zero acceleration? (ii) Which photograph shows motion with positive acceleration? (iii) Which photograph shows motion with negative acceleration?



a



b



c

© Cengage Learning/Charles D. Winters

Figure OQ2.18 Objective Question 18 and Problem 23.

Conceptual Questions

1. denotes answer available in *Student Solutions Manual/Study Guide*

- If the average velocity of an object is zero in some time interval, what can you say about the displacement of the object for that interval?
- Try the following experiment away from traffic where you can do it safely. With the car you are driving moving slowly on a straight, level road, shift the transmission into neutral and let the car coast. At the moment the car comes to a complete stop, step hard on the brake and notice what you feel. Now repeat the same experiment on a fairly gentle, uphill slope. Explain the difference in what a person riding in the car feels in the two cases. (Brian Popp suggested the idea for this question.)
- If a car is traveling eastward, can its acceleration be westward? Explain.
- If the velocity of a particle is zero, can the particle's acceleration be zero? Explain.
- If the velocity of a particle is nonzero, can the particle's acceleration be zero? Explain.
- You throw a ball vertically upward so that it leaves the ground with velocity $+5.00$ m/s. (a) What is its velocity when it reaches its maximum altitude? (b) What is its acceleration at this point? (c) What is the velocity with which it returns to ground level? (d) What is its acceleration at this point?
- (a) Can the equations of kinematics (Eqs. 2.13–2.17) be used in a situation in which the acceleration varies in time? (b) Can they be used when the acceleration is zero?
- (a) Can the velocity of an object at an instant of time be greater in magnitude than the average velocity over a time interval containing the instant? (b) Can it be less?
- Two cars are moving in the same direction in parallel lanes along a highway. At some instant, the velocity of car A exceeds the velocity of car B. Does that mean that the acceleration of car A is greater than that of car B? Explain.

Problems

ENHANCED

WebAssign

The problems found in this chapter may be assigned online in Enhanced WebAssign

1. straightforward; 2. intermediate; 3. challenging

1. full solution available in the *Student Solutions Manual/Study Guide*

AMT Analysis Model tutorial available in Enhanced WebAssign

GP Guided Problem

M Master It tutorial available in Enhanced WebAssign

W Watch It video solution available in Enhanced WebAssign

Section 2.1 Position, Velocity, and Speed

1. The position versus time for a certain particle moving along the x axis is shown in Figure P2.1. Find the average velocity in the time intervals (a) 0 to 2 s, (b) 0 to 4 s, (c) 2 s to 4 s, (d) 4 s to 7 s, and (e) 0 to 8 s.

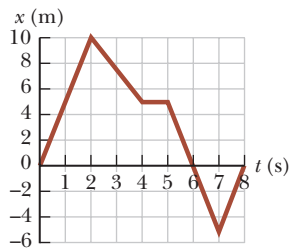


Figure P2.1 Problems 1 and 9.

2. The speed of a nerve impulse in the human body is about 100 m/s. If you accidentally stub your toe in the dark, estimate the time it takes the nerve impulse to travel to your brain.
3. A person walks first at a constant speed of 5.00 m/s along a straight line from point A to point B and then back along the line from B to A at a constant speed of 3.00 m/s. (a) What is her average speed over the entire trip? (b) What is her average velocity over the entire trip?
4. A particle moves according to the equation $x = 10t^2$, where x is in meters and t is in seconds. (a) Find the average velocity for the time interval from 2.00 s to 3.00 s. (b) Find the average velocity for the time interval from 2.00 to 2.10 s.
5. The position of a pinewood derby car was observed at various times; the results are summarized in the following table. Find the average velocity of the car for (a) the first second, (b) the last 3 s, and (c) the entire period of observation.

t (s)	0	1.0	2.0	3.0	4.0	5.0
x (m)	0	2.3	9.2	20.7	36.8	57.5

Section 2.2 Instantaneous Velocity and Speed

6. The position of a particle moving along the x axis varies in time according to the expression $x = 3t^2$, where x is in meters and t is in seconds. Evaluate its position (a) at $t = 3.00$ s and (b) at 3.00 s + Δt . (c) Evaluate the limit of $\Delta x/\Delta t$ as Δt approaches zero to find the velocity at $t = 3.00$ s.

7. A position–time graph for a particle moving along the x axis is shown in Figure P2.7. (a) Find the average velocity in the time interval $t = 1.50$ s to $t = 4.00$ s. (b) Determine the instantaneous velocity at $t = 2.00$ s by measuring the slope of the tangent line shown in the graph. (c) At what value of t is the velocity zero?

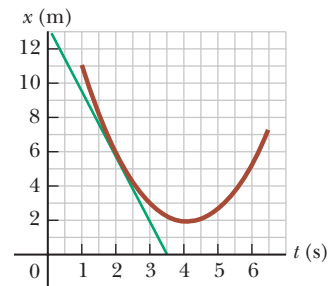


Figure P2.7

8. An athlete leaves one end of a pool of length L at $t = 0$ and arrives at the other end at time t_1 . She swims back and arrives at the starting position at time t_2 . If she is swimming initially in the positive x direction, determine her average velocities symbolically in (a) the first half of the swim, (b) the second half of the swim, and (c) the round trip. (d) What is her average speed for the round trip?
9. Find the instantaneous velocity of the particle described in Figure P2.1 at the following times: (a) $t = 1.0$ s, (b) $t = 3.0$ s, (c) $t = 4.5$ s, and (d) $t = 7.5$ s.

Section 2.3 Analysis Model: Particle Under Constant Velocity

10. **Review.** The North American and European plates of the Earth's crust are drifting apart with a relative speed of about 25 mm/yr. Take the speed as constant and find when the rift between them started to open, to reach a current width of 2.9×10^3 mi.
11. A hare and a tortoise compete in a race over a straight course 1.00 km long. The tortoise crawls at a speed of 0.200 m/s toward the finish line. The hare runs at a speed of 8.00 m/s toward the finish line for 0.800 km and then stops to tease the slow-moving tortoise as the tortoise eventually passes by. The hare waits for a while after the tortoise passes and then runs toward the finish line again at 8.00 m/s. Both the hare and the tortoise cross the finish line at the exact same instant. Assume both animals, when moving, move steadily at

their respective speeds. (a) How far is the tortoise from the finish line when the hare resumes the race? (b) For how long in time was the hare stationary?

- 12.** A car travels along a straight line at a constant speed of 60.0 mi/h for a distance d and then another distance d in the same direction at another constant speed. The average velocity for the entire trip is 30.0 mi/h. (a) What is the constant speed with which the car moved during the second distance d ? (b) **What If?** Suppose the second distance d were traveled in the opposite direction; you forgot something and had to return home at the same constant speed as found in part (a). What is the average velocity for this trip? (c) What is the average speed for this new trip?

- 13.** A person takes a trip, driving with a constant speed of 89.5 km/h, except for a 22.0-min rest stop. If the person's average speed is 77.8 km/h, (a) how much time is spent on the trip and (b) how far does the person travel?

Section 2.4 Acceleration

- 14.** **Review.** A 50.0-g Super Ball traveling at 25.0 m/s bounces off a brick wall and rebounds at 22.0 m/s. A high-speed camera records this event. If the ball is in contact with the wall for 3.50 ms, what is the magnitude of the average acceleration of the ball during this time interval?

- 15.** A velocity–time graph for an object moving along the x axis is shown in Figure P2.15. (a) Plot a graph of the acceleration versus time. Determine the average acceleration of the object (b) in the time interval $t = 5.00$ s to $t = 15.0$ s and (c) in the time interval $t = 0$ to $t = 20.0$ s.

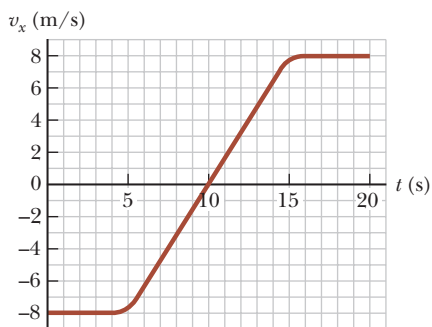


Figure P2.15

- 16.** A child rolls a marble on a bent track that is 100 cm long as shown in Figure P2.16. We use x to represent the position of the marble along the track. On the horizontal sections from $x = 0$ to $x = 20$ cm and from $x = 40$ cm to $x = 60$ cm, the marble rolls with constant speed. On the sloping sections, the marble's speed changes steadily. At the places where the slope changes, the marble stays on the track and does not undergo any sudden changes in speed. The child gives the marble some initial speed at $x = 0$ and $t = 0$ and then watches it roll to $x = 90$ cm, where it turns around, eventually returning to $x = 0$ with the same speed with which the child released it. Prepare graphs of x versus t , v_x versus t , and a_x versus t , vertically aligned with their time axes identical, to show the motion of the marble. You will not be able to place numbers other than zero on the

horizontal axis or on the velocity or acceleration axes, but show the correct graph shapes.

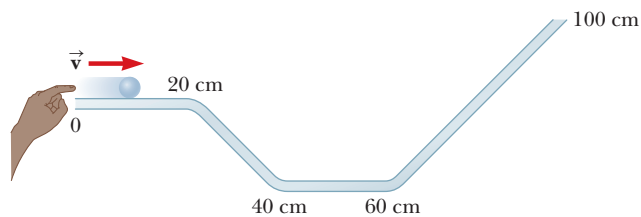


Figure P2.16

- 17.** Figure P2.17 shows a graph of v_x versus t for the motion of a motorcyclist as he starts from rest and moves along the road in a straight line. (a) Find the average acceleration for the time interval $t = 0$ to $t = 6.00$ s. (b) Estimate the time at which the acceleration has its greatest positive value and the value of the acceleration at that instant. (c) When is the acceleration zero? (d) Estimate the maximum negative value of the acceleration and the time at which it occurs.

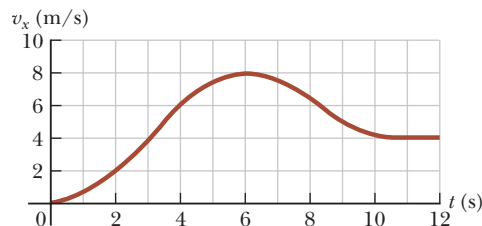


Figure P2.17

- 18.** (a) Use the data in Problem 5 to construct a smooth graph of position versus time. (b) By constructing tangents to the $x(t)$ curve, find the instantaneous velocity of the car at several instants. (c) Plot the instantaneous velocity versus time and, from this information, determine the average acceleration of the car. (d) What was the initial velocity of the car?

- 19.** A particle starts from rest and accelerates as shown in Figure P2.19. Determine (a) the particle's speed at $t = 10.0$ s and at $t = 20.0$ s, and (b) the distance traveled in the first 20.0 s.

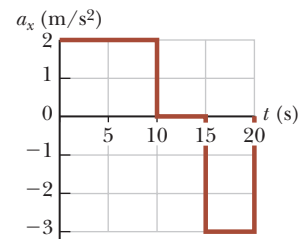


Figure P2.19

- 20.** An object moves along the x axis according to the equation $x = 3.00t^2 - 2.00t + 3.00$, where x is in meters and t is in seconds. Determine (a) the average speed between $t = 2.00$ s and $t = 3.00$ s, (b) the instantaneous speed at $t = 2.00$ s and at $t = 3.00$ s, (c) the average acceleration between $t = 2.00$ s and $t = 3.00$ s, and (d) the instantaneous acceleration at $t = 2.00$ s and $t = 3.00$ s. (e) At what time is the object at rest?

- 21.** A particle moves along the x axis according to the equation $x = 2.00 + 3.00t - 1.00t^2$, where x is in meters and t is in seconds. At $t = 3.00$ s, find (a) the position of the particle, (b) its velocity, and (c) its acceleration.

Section 2.5 Motion Diagrams

22. Draw motion diagrams for (a) an object moving to the right at constant speed, (b) an object moving to the right and speeding up at a constant rate, (c) an object moving to the right and slowing down at a constant rate, (d) an object moving to the left and speeding up at a constant rate, and (e) an object moving to the left and slowing down at a constant rate. (f) How would your drawings change if the changes in speed were not uniform, that is, if the speed were not changing at a constant rate?
23. Each of the strobe photographs (a), (b), and (c) in Figure OQ2.18 was taken of a single disk moving toward the right, which we take as the positive direction. Within each photograph the time interval between images is constant. For each photograph, prepare graphs of x versus t , v_x versus t , and a_x versus t , vertically aligned with their time axes identical, to show the motion of the disk. You will not be able to place numbers other than zero on the axes, but show the correct shapes for the graph lines.

Section 2.6 Analysis Model: Particle Under Constant Acceleration

24. The minimum distance required to stop a car moving at 35.0 mi/h is 40.0 ft. What is the minimum stopping distance for the same car moving at 70.0 mi/h, assuming the same rate of acceleration?
25. An electron in a cathode-ray tube accelerates uniformly from 2.00×10^4 m/s to 6.00×10^6 m/s over 1.50 cm. (a) In what time interval does the electron travel this 1.50 cm? (b) What is its acceleration?
26. A speedboat moving at 30.0 m/s approaches a no-wake buoy marker 100 m ahead. The pilot slows the boat with a constant acceleration of -3.50 m/s² by reducing the throttle. (a) How long does it take the boat to reach the buoy? (b) What is the velocity of the boat when it reaches the buoy?
27. A parcel of air moving in a straight tube with a constant acceleration of -4.00 m/s² has a velocity of 13.0 m/s at 10:05:00 a.m. (a) What is its velocity at 10:05:01 a.m.? (b) At 10:05:04 a.m.? (c) At 10:04:59 a.m.? (d) Describe the shape of a graph of velocity versus time for this parcel of air. (e) Argue for or against the following statement: "Knowing the single value of an object's constant acceleration is like knowing a whole list of values for its velocity."
28. A truck covers 40.0 m in 8.50 s while smoothly slowing down to a final speed of 2.80 m/s. (a) Find its original speed. (b) Find its acceleration.
29. An object moving with uniform acceleration has a velocity of 12.0 cm/s in the positive x direction when its x coordinate is 3.00 cm. If its x coordinate 2.00 s later is -5.00 cm, what is its acceleration?
30. In Example 2.7, we investigated a jet landing on an aircraft carrier. In a later maneuver, the jet comes in for a landing on solid ground with a speed of 100 m/s, and its acceleration can have a maximum magnitude

of 5.00 m/s² as it comes to rest. (a) From the instant the jet touches the runway, what is the minimum time interval needed before it can come to rest? (b) Can this jet land at a small tropical island airport where the runway is 0.800 km long? (c) Explain your answer.

31. **Review.** Colonel John P. Stapp, USAF, participated in studying whether a jet pilot could survive emergency ejection. On March 19, 1954, he rode a rocket-propelled sled that moved down a track at a speed of 632 mi/h. He and the sled were safely brought to rest in 1.40 s (Fig. P2.31). Determine (a) the negative acceleration he experienced and (b) the distance he traveled during this negative acceleration.




Figure P2.31 (left) Col. John Stapp and his rocket sled are brought to rest in a very short time interval. (right) Stapp's face is contorted by the stress of rapid negative acceleration.

32. Solve Example 2.8 by a graphical method. On the same graph, plot position versus time for the car and the trooper. From the intersection of the two curves, read the time at which the trooper overtakes the car.
33. A truck on a straight road starts from rest, accelerating at 2.00 m/s² until it reaches a speed of 20.0 m/s. Then the truck travels for 20.0 s at constant speed until the brakes are applied, stopping the truck in a uniform manner in an additional 5.00 s. (a) How long is the truck in motion? (b) What is the average velocity of the truck for the motion described?
34. *Why is the following situation impossible?* Starting from rest, a charging rhinoceros moves 50.0 m in a straight line in 10.0 s. Her acceleration is constant during the entire motion, and her final speed is 8.00 m/s.
35. **AMT** The driver of a car slams on the brakes when he sees a tree blocking the road. The car slows uniformly with an acceleration of -5.60 m/s² for 4.20 s, making straight skid marks 62.4 m long, all the way to the tree. With what speed does the car then strike the tree?
36. In the particle under constant acceleration model, we identify the variables and parameters v_{xi} , v_{xf} , a_x , t , and $x_f - x_i$. Of the equations in the model, Equations 2.13–2.17, the first does not involve $x_f - x_i$, the second and third do not contain a_x , the fourth omits v_{xf} , and the last leaves out t . So, to complete the set, there should be an equation *not* involving v_{xi} . (a) Derive it from the others. (b) Use the equation in part (a) to solve Problem 35 in one step.
37. **AMT** A speedboat travels in a straight line and increases in speed uniformly from $v_i = 20.0$ m/s to $v_f = 30.0$ m/s in a displacement Δx of 200 m. We wish to find the time interval required for the boat to move through this

displacement. (a) Draw a coordinate system for this situation. (b) What analysis model is most appropriate for describing this situation? (c) From the analysis model, what equation is most appropriate for finding the acceleration of the speedboat? (d) Solve the equation selected in part (c) symbolically for the boat's acceleration in terms of v_i , v_f , and Δx . (e) Substitute numerical values to obtain the acceleration numerically. (f) Find the time interval mentioned above.

38. A particle moves along the x axis. Its position is given by the equation $x = 2 + 3t - 4t^2$, with x in meters and t in seconds. Determine (a) its position when it changes direction and (b) its velocity when it returns to the position it had at $t = 0$.

39. A glider of length ℓ moves through a stationary photogate on an air track. A photogate (Fig. P2.39) is a device that measures the time interval Δt_d during which the glider blocks a beam of infrared light passing across the photogate. The ratio $v_d = \ell/\Delta t_d$ is the average velocity of the glider over this part of its motion. Suppose the glider moves with constant acceleration. (a) Argue for or against the idea that v_d is equal to the instantaneous velocity of the glider when it is halfway through the photogate in space. (b) Argue for or against the idea that v_d is equal to the instantaneous velocity of the glider when it is halfway through the photogate in time.




Figure P2.39 Problems 39 and 40.

40. A glider of length 12.4 cm moves on an air track with constant acceleration (Fig P2.39). A time interval of 0.628 s elapses between the moment when its front end passes a fixed point \textcircled{A} along the track and the moment when its back end passes this point. Next, a time interval of 1.39 s elapses between the moment when the back end of the glider passes the point \textcircled{A} and the moment when the front end of the glider passes a second point \textcircled{B} farther down the track. After that, an additional 0.431 s elapses until the back end of the glider passes point \textcircled{B} . (a) Find the average speed of the glider as it passes point \textcircled{A} . (b) Find the acceleration of the glider. (c) Explain how you can compute the acceleration without knowing the distance between points \textcircled{A} and \textcircled{B} .

41. An object moves with constant acceleration 4.00 m/s^2 and over a time interval reaches a final velocity of 12.0 m/s . (a) If its initial velocity is 6.00 m/s , what is its displacement during the time interval? (b) What is the distance it travels during this interval? (c) If its initial velocity is -6.00 m/s , what is its displacement during

the time interval? (d) What is the total distance it travels during the interval in part (c)?

42. At $t = 0$, one toy car is set rolling on a straight track with initial position 15.0 cm , initial velocity -3.50 cm/s , and constant acceleration 2.40 cm/s^2 . At the same moment, another toy car is set rolling on an adjacent track with initial position 10.0 cm , initial velocity $+5.50 \text{ cm/s}$, and constant acceleration zero. (a) At what time, if any, do the two cars have equal speeds? (b) What are their speeds at that time? (c) At what time(s), if any, do the cars pass each other? (d) What are their locations at that time? (e) Explain the difference between question (a) and question (c) as clearly as possible.

43. Figure P2.43 represents part of the performance data of a car owned by a proud physics student. (a) Calculate the total distance traveled by computing the area under the red-brown graph line. (b) What distance does the car travel between the times $t = 10 \text{ s}$ and $t = 40 \text{ s}$? (c) Draw a graph of its acceleration versus time between $t = 0$ and $t = 50 \text{ s}$. (d) Write an equation for x as a function of time for each phase of the motion, represented by the segments $0a$, ab , and bc . (e) What is the average velocity of the car between $t = 0$ and $t = 50 \text{ s}$?

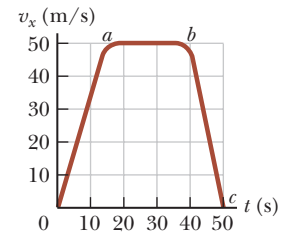


Figure P2.43

44. A hockey player is standing on his skates on a frozen pond when an opposing player, moving with a uniform speed of 12.0 m/s , skates by with the puck. After 3.00 s , the first player makes up his mind to chase his opponent. If he accelerates uniformly at 4.00 m/s^2 , (a) how long does it take him to catch his opponent and (b) how far has he traveled in that time? (Assume the player with the puck remains in motion at constant speed.)

Section 2.7 Freely Falling Objects

Note: In all problems in this section, ignore the effects of air resistance.

45. In Chapter 9, we will define the center of mass of an object and prove that its motion is described by the particle under constant acceleration model when constant forces act on the object. A gymnast jumps straight up, with her center of mass moving at 2.80 m/s as she leaves the ground. How high above this point is her center of mass (a) 0.100 s , (b) 0.200 s , (c) 0.300 s , and (d) 0.500 s thereafter?

46. An attacker at the base of a castle wall 3.65 m high throws a rock straight up with speed 7.40 m/s from a height of 1.55 m above the ground. (a) Will the rock reach the top of the wall? (b) If so, what is its speed at the top? If not, what initial speed must it have to reach the top? (c) Find the change in speed of a rock thrown straight down from the top of the wall at an initial speed of 7.40 m/s and moving between the same two

points. (d) Does the change in speed of the downward-moving rock agree with the magnitude of the speed change of the rock moving upward between the same elevations? (e) Explain physically why it does or does not agree.

47. Why is the following situation impossible? Emily challenges David to catch a \$1 bill as follows. She holds the bill vertically as shown in Figure P2.47, with the center of the bill between but not touching David's index finger and thumb. Without warning, Emily releases the bill. David catches the bill without moving his hand downward. David's reaction time is equal to the average human reaction time.



Figure P2.47

48. **W** A baseball is hit so that it travels straight upward after being struck by the bat. A fan observes that it takes 3.00 s for the ball to reach its maximum height. Find (a) the ball's initial velocity and (b) the height it reaches.
49. It is possible to shoot an arrow at a speed as high as 100 m/s. (a) If friction can be ignored, how high would an arrow launched at this speed rise if shot straight up? (b) How long would the arrow be in the air?
50. The height of a helicopter above the ground is given by $h = 3.00t^3$, where h is in meters and t is in seconds. At $t = 2.00$ s, the helicopter releases a small mailbag. How long after its release does the mailbag reach the ground?
51. **W** A ball is thrown directly downward with an initial speed of 8.00 m/s from a height of 30.0 m. After what time interval does it strike the ground?
52. **M** A ball is thrown upward from the ground with an initial speed of 25 m/s; at the same instant, another ball is dropped from a building 15 m high. After how long will the balls be at the same height above the ground?
53. **M** A student throws a set of keys vertically upward to her sorority sister, who is in a window 4.00 m above. The second student catches the keys 1.50 s later. (a) With what initial velocity were the keys thrown? (b) What was the velocity of the keys just before they were caught?
54. At time $t = 0$, a student throws a set of keys vertically upward to her sorority sister, who is in a window at distance h above. The second student catches the keys at time t . (a) With what initial velocity were the keys thrown? (b) What was the velocity of the keys just before they were caught?
55. **AMT** A daring ranch hand sitting on a tree limb wishes to drop vertically onto a horse galloping under the tree. The constant speed of the horse is 10.0 m/s, and the distance from the limb to the level of the saddle is 3.00 m. (a) What must be the horizontal distance between the saddle and limb when the ranch hand makes his move? (b) For what time interval is he in the air?

56. A package is dropped at time $t = 0$ from a helicopter that is descending steadily at a speed v_i . (a) What is the speed of the package in terms of v_i , g , and t ? (b) What vertical distance d is it from the helicopter in terms of g and t ? (c) What are the answers to parts (a) and (b) if the helicopter is rising steadily at the same speed?

Section 2.8 Kinematic Equations Derived from Calculus

57. Automotive engineers refer to the time rate of change of acceleration as the "jerk." Assume an object moves in one dimension such that its jerk J is constant. (a) Determine expressions for its acceleration $a_x(t)$, velocity $v_x(t)$, and position $x(t)$, given that its initial acceleration, velocity, and position are a_{xi} , v_{xi} , and x_i , respectively. (b) Show that $a_x^2 = a_{xi}^2 + 2J(v_x - v_{xi})$.
58. A student drives a moped along a straight road as described by the velocity–time graph in Figure P2.58. Sketch this graph in the middle of a sheet of graph paper. (a) Directly above your graph, sketch a graph of the position versus time, aligning the time coordinates of the two graphs. (b) Sketch a graph of the acceleration versus time directly below the velocity–time graph, again aligning the time coordinates. On each graph, show the numerical values of x and a_x for all points of inflection. (c) What is the acceleration at $t = 6.00$ s? (d) Find the position (relative to the starting point) at $t = 6.00$ s. (e) What is the moped's final position at $t = 9.00$ s?
59. The speed of a bullet as it travels down the barrel of a rifle toward the opening is given by

$$v = (-5.00 \times 10^7)t^2 + (3.00 \times 10^5)t$$

where v is in meters per second and t is in seconds. The acceleration of the bullet just as it leaves the barrel is zero. (a) Determine the acceleration and position of the bullet as functions of time when the bullet is in the barrel. (b) Determine the time interval over which the bullet is accelerated. (c) Find the speed at which the bullet leaves the barrel. (d) What is the length of the barrel?

Additional Problems

60. A certain automobile manufacturer claims that its deluxe sports car will accelerate from rest to a speed of 42.0 m/s in 8.00 s. (a) Determine the average acceleration of the car. (b) Assume that the car moves with constant acceleration. Find the distance the car travels in the first 8.00 s. (c) What is the speed of the car 10.0 s after it begins its motion if it can continue to move with the same acceleration?
61. The froghopper *Philaenus spumarius* is supposedly the best jumper in the animal kingdom. To start a jump, this insect can accelerate at 4.00 km/s^2 over a distance of 2.00 mm as it straightens its specially adapted

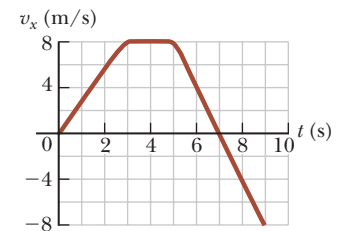


Figure P2.58

“jumping legs.” Assume the acceleration is constant. (a) Find the upward velocity with which the insect takes off. (b) In what time interval does it reach this velocity? (c) How high would the insect jump if air resistance were negligible? The actual height it reaches is about 70 cm, so air resistance must be a noticeable force on the leaping frog hopper.

62. An object is at $x = 0$ at $t = 0$ and moves along the x axis according to the velocity–time graph in Figure P2.62. (a) What is the object’s acceleration between 0 and 4.0 s? (b) What is the object’s acceleration between 4.0 s and 9.0 s? (c) What is the object’s acceleration between 13.0 s and 18.0 s? (d) At what time(s) is the object moving with the lowest speed? (e) At what time is the object farthest from $x = 0$? (f) What is the final position x of the object at $t = 18.0$ s? (g) Through what total distance has the object moved between $t = 0$ and $t = 18.0$ s?

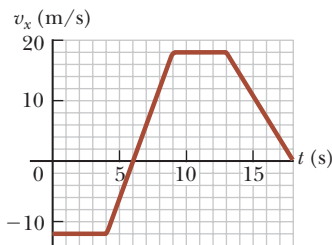


Figure P2.62

63. An inquisitive physics student and mountain climber climbs a 50.0-m-high cliff that overhangs a calm pool of water. He throws two stones vertically downward, 1.00 s apart, and observes that they cause a single splash. The first stone has an initial speed of 2.00 m/s. (a) How long after release of the first stone do the two stones hit the water? (b) What initial velocity must the second stone have if the two stones are to hit the water simultaneously? (c) What is the speed of each stone at the instant the two stones hit the water?

64. In Figure 2.11b, the area under the velocity–time graph and between the vertical axis and time t (vertical dashed line) represents the displacement. As shown, this area consists of a rectangle and a triangle. (a) Compute their areas. (b) Explain how the sum of the two areas compares with the expression on the right-hand side of Equation 2.16.

65. A ball starts from rest and accelerates at 0.500 m/s^2 while moving down an inclined plane 9.00 m long. When it reaches the bottom, the ball rolls up another plane, where it comes to rest after moving 15.0 m on that plane. (a) What is the speed of the ball at the bottom of the first plane? (b) During what time interval does the ball roll down the first plane? (c) What is the acceleration along the second plane? (d) What is the ball’s speed 8.00 m along the second plane?

66. A woman is reported to have fallen 144 ft from the 17th floor of a building, landing on a metal ventilator box that she crushed to a depth of 18.0 in. She suffered only minor injuries. Ignoring air resistance, calculate

(a) the speed of the woman just before she collided with the ventilator and (b) her average acceleration while in contact with the box. (c) Modeling her acceleration as constant, calculate the time interval it took to crush the box.

67. An elevator moves downward in a tall building at a constant speed of 5.00 m/s. Exactly 5.00 s after the top of the elevator car passes a bolt loosely attached to the wall of the elevator shaft, the bolt falls from rest. (a) At what time does the bolt hit the top of the still-descending elevator? (b) In what way is this problem similar to Example 2.8? (c) Estimate the highest floor from which the bolt can fall if the elevator reaches the ground floor before the bolt hits the top of the elevator.

68. Why is the following situation impossible? A freight train is lumbering along at a constant speed of 16.0 m/s. Behind the freight train on the same track is a passenger train traveling in the same direction at 40.0 m/s. When the front of the passenger train is 58.5 m from the back of the freight train, the engineer on the passenger train recognizes the danger and hits the brakes of his train, causing the train to move with acceleration -3.00 m/s^2 . Because of the engineer’s action, the trains do not collide.

69. The Acela is an electric train on the Washington–New York–Boston run, carrying passengers at 170 mi/h. A velocity–time graph for the Acela is shown in Figure P2.69. (a) Describe the train’s motion in each successive time interval. (b) Find the train’s peak positive acceleration in the motion graphed. (c) Find the train’s displacement in miles between $t = 0$ and $t = 200$ s.

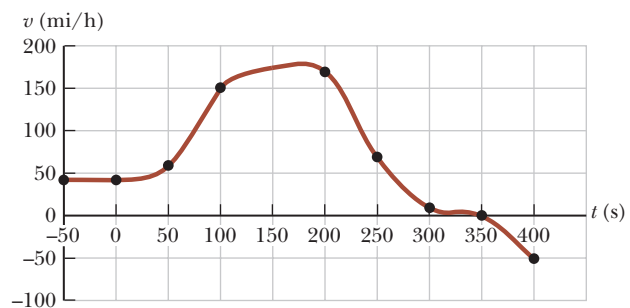


Figure P2.69 Velocity–time graph for the Acela.

70. Two objects move with initial velocity -8.00 m/s , final velocity 16.0 m/s , and constant accelerations. (a) The first object has displacement 20.0 m. Find its acceleration. (b) The second object travels a total distance of 22.0 m. Find its acceleration.

71. At $t = 0$, one athlete in a race running on a long, straight track with a constant speed v_1 is a distance d_1 behind a second athlete running with a constant speed v_2 . (a) Under what circumstances is the first athlete able to overtake the second athlete? (b) Find the time t at which the first athlete overtakes the second athlete, in terms of d_1 , v_1 , and v_2 . (c) At what minimum distance d_2 from the leading athlete must the finish line

be located so that the trailing athlete can at least tie for first place? Express d_2 in terms of d_1 , v_1 , and v_2 by using the result of part (b).

72. A catapult launches a test rocket vertically upward from a well, giving the rocket an initial speed of 80.0 m/s at ground level. The engines then fire, and the rocket accelerates upward at 4.00 m/s² until it reaches an altitude of 1 000 m. At that point, its engines fail and the rocket goes into free fall, with an acceleration of -9.80 m/s². (a) For what time interval is the rocket in motion above the ground? (b) What is its maximum altitude? (c) What is its velocity just before it hits the ground? (You will need to consider the motion while the engine is operating and the free-fall motion separately.)

73. Kathy tests her new sports car by racing with Stan, an experienced racer. Both start from rest, but Kathy leaves the starting line 1.00 s after Stan does. Stan moves with a constant acceleration of 3.50 m/s², while Kathy maintains an acceleration of 4.90 m/s². Find (a) the time at which Kathy overtakes Stan, (b) the distance she travels before she catches him, and (c) the speeds of both cars at the instant Kathy overtakes Stan.

74. Two students are on a balcony a distance h above the street. One student throws a ball vertically downward at a speed v_i ; at the same time, the other student throws a ball vertically upward at the same speed. Answer the following symbolically in terms of v_i , g , h , and t . (a) What is the time interval between when the first ball strikes the ground and the second ball strikes the ground? (b) Find the velocity of each ball as it strikes the ground. (c) How far apart are the balls at a time t after they are thrown and before they strike the ground?

75. Two objects, A and B, are connected by hinges to a rigid rod that has a length L . The objects slide along perpendicular guide rails as shown in Figure P2.75. Assume object A slides to the left with a constant speed v . (a) Find the velocity v_B of object B as a function of the angle θ . (b) Describe v_B relative to v . Is v_B always smaller than v , larger than v , or the same as v , or does it have some other relationship?

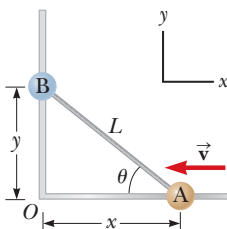


Figure P2.75

76. Astronauts on a distant planet toss a rock into the air. With the aid of a camera that takes pictures at a steady rate, they record the rock's height as a function of time as given in the following table. (a) Find the rock's average velocity in the time interval between each measurement and the next. (b) Using these average velocities to approximate instantaneous velocities at the midpoints of the time intervals, make a graph of velocity as a function of time. (c) Does the rock move with constant acceleration? If so, plot a straight line of best fit on the graph and calculate its slope to find the acceleration.

Time (s)	Height (m)	Time (s)	Height (m)
0.00	5.00	2.75	7.62
0.25	5.75	3.00	7.25
0.50	6.40	3.25	6.77
0.75	6.94	3.50	6.20
1.00	7.38	3.75	5.52
1.25	7.72	4.00	4.73
1.50	7.96	4.25	3.85
1.75	8.10	4.50	2.86
2.00	8.13	4.75	1.77
2.25	8.07	5.00	0.58
2.50	7.90		

77. A motorist drives along a straight road at a constant speed of 15.0 m/s. Just as she passes a parked motorcycle police officer, the officer starts to accelerate at 2.00 m/s² to overtake her. Assuming that the officer maintains this acceleration, (a) determine the time interval required for the police officer to reach the motorist. Find (b) the speed and (c) the total displacement of the officer as he overtakes the motorist.
78. A commuter train travels between two downtown stations. Because the stations are only 1.00 km apart, the train never reaches its maximum possible cruising speed. During rush hour the engineer minimizes the time interval Δt between two stations by accelerating at a rate $a_1 = 0.100$ m/s² for a time interval Δt_1 and then immediately braking with acceleration $a_2 = -0.500$ m/s² for a time interval Δt_2 . Find the minimum time interval of travel Δt and the time interval Δt_1 .
79. Liz rushes down onto a subway platform to find her train already departing. She stops and watches the cars go by. Each car is 8.60 m long. The first moves past her in 1.50 s and the second in 1.10 s. Find the constant acceleration of the train.
80. A hard rubber ball, released at chest height, falls to the pavement and bounces back to nearly the same height. When it is in contact with the pavement, the lower side of the ball is temporarily flattened. Suppose the maximum depth of the dent is on the order of 1 cm. Find the order of magnitude of the maximum acceleration of the ball while it is in contact with the pavement. State your assumptions, the quantities you estimate, and the values you estimate for them.

Challenge Problems

81. A blue car of length 4.52 m is moving north on a roadway that intersects another perpendicular roadway (Fig. P2.81, page 58). The width of the intersection from near edge to far edge is 28.0 m. The blue car has a constant acceleration of magnitude 2.10 m/s² directed south. The time interval required for the nose of the blue car to move from the near (south) edge of the intersection to the north edge of the intersection is 3.10 s. (a) How far is the nose of the blue car from the south edge of the intersection when it stops? (b) For what time interval is any part of the blue car within the boundaries of the intersection? (c) A red car is at rest on the perpendicular intersecting roadway. As the nose of the blue car

enters the intersection, the red car starts from rest and accelerates east at 5.60 m/s^2 . What is the minimum distance from the near (west) edge of the intersection at which the nose of the red car can begin its motion if it is to enter the intersection after the blue car has entirely left the intersection? (d) If the red car begins its motion at the position given by the answer to part (c), with what speed does it enter the intersection?

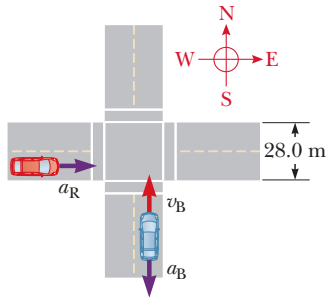


Figure P2.81

- 82. Review.** As soon as a traffic light turns green, a car speeds up from rest to 50.0 mi/h with constant acceleration 9.00 mi/h/s . In the adjoining bicycle lane, a cyclist speeds up from rest to 20.0 mi/h with constant acceleration 13.0 mi/h/s . Each vehicle maintains constant velocity after reaching its cruising speed. (a) For what time interval is the bicycle ahead of the car? (b) By what maximum distance does the bicycle lead the car?
- 83.** In a women's 100-m race, accelerating uniformly, Laura takes 2.00 s and Healan 3.00 s to attain their maximum speeds, which they each maintain for the rest of the race. They cross the finish line simultaneously, both setting a world record of 10.4 s . (a) What is the acceleration of each sprinter? (b) What are their respective maximum speeds? (c) Which sprinter is

ahead at the 6.00-s mark, and by how much? (d) What is the maximum distance by which Healan is behind Laura, and at what time does that occur?

- 84.** Two thin rods are fastened to the inside of a circular ring as shown in Figure P2.84. One rod of length D is vertical, and the other of length L makes an angle θ with the horizontal. The two rods and the ring lie in a vertical plane. Two small beads are free to slide without friction along the rods. (a) If the two beads are released from rest simultaneously from the positions shown, use your intuition and guess which bead reaches the bottom first. (b) Find an expression for the time interval required for the red bead to fall from point **A** to point **C** in terms of g and D . (c) Find an expression for the time interval required for the blue bead to slide from point **B** to point **C** in terms of g , L , and θ . (d) Show that the two time intervals found in parts (b) and (c) are equal. *Hint:* What is the angle between the chords of the circle **A** **B** and **B** **C**? (e) Do these results surprise you? Was your intuitive guess in part (a) correct? This problem was inspired by an article by Thomas B. Greenslade, Jr., "Galileo's Paradox," *Phys. Teach.* **46**, 294 (May 2008).

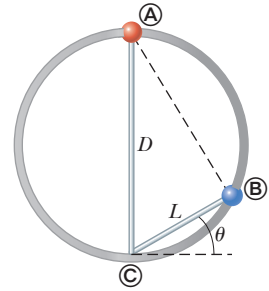


Figure P2.84

- 85.** A man drops a rock into a well. (a) The man hears the sound of the splash 2.40 s after he releases the rock from rest. The speed of sound in air (at the ambient temperature) is 336 m/s . How far below the top of the well is the surface of the water? (b) **What If?** If the travel time for the sound is ignored, what percentage error is introduced when the depth of the well is calculated?

Vectors



- 3.1 Coordinate Systems
- 3.2 Vector and Scalar Quantities
- 3.3 Some Properties of Vectors
- 3.4 Components of a Vector and Unit Vectors

In our study of physics, we often need to work with physical quantities that have both numerical and directional properties. As noted in Section 2.1, quantities of this nature are vector quantities. This chapter is primarily concerned with general properties of vector quantities. We discuss the addition and subtraction of vector quantities, together with some common applications to physical situations.

Vector quantities are used throughout this text. Therefore, it is imperative that you master the techniques discussed in this chapter.

A signpost in Saint Petersburg, Florida, shows the distance and direction to several cities. Quantities that are defined by both a magnitude and a direction are called vector quantities.

(Raymond A. Serway)

3.1 Coordinate Systems

Many aspects of physics involve a description of a location in space. In Chapter 2, for example, we saw that the mathematical description of an object's motion requires a method for describing the object's position at various times. In two dimensions, this description is accomplished with the use of the Cartesian coordinate system, in which perpendicular axes intersect at a point defined as the origin O (Fig. 3.1). Cartesian coordinates are also called *rectangular coordinates*.

Sometimes it is more convenient to represent a point in a plane by its *plane polar coordinates* (r, θ) as shown in Figure 3.2a (page 60). In this *polar coordinate system*, r is the distance from the origin to the point having Cartesian coordinates (x, y) and θ is the angle between a fixed axis and a line drawn from the origin to the point. The fixed axis is often the positive x axis, and θ is usually measured counterclockwise

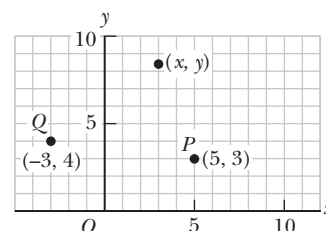


Figure 3.1 Designation of points in a Cartesian coordinate system. Every point is labeled with coordinates (x, y) .

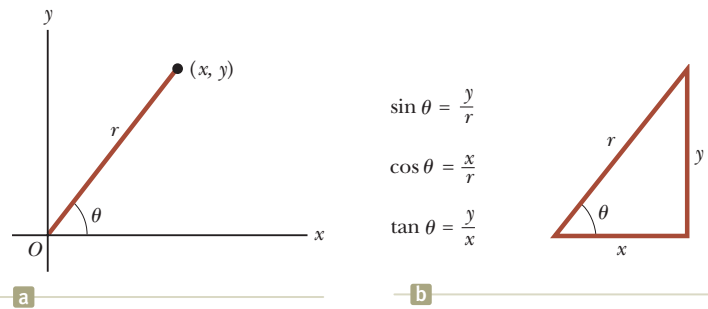


Figure 3.2 (a) The plane polar coordinates of a point are represented by the distance r and the angle θ , where θ is measured counterclockwise from the positive x axis. (b) The right triangle used to relate (x, y) to (r, θ) .

from it. From the right triangle in Figure 3.2b, we find that $\sin \theta = y/r$ and that $\cos \theta = x/r$. (A review of trigonometric functions is given in Appendix B.4.) Therefore, starting with the plane polar coordinates of any point, we can obtain the Cartesian coordinates by using the equations

Cartesian coordinates
in terms of polar
coordinates

$$x = r \cos \theta \quad (3.1)$$

$$y = r \sin \theta \quad (3.2)$$

Furthermore, if we know the Cartesian coordinates, the definitions of trigonometry tell us that

Polar coordinates in terms
of Cartesian coordinates

$$\tan \theta = \frac{y}{x} \quad (3.3)$$

$$r = \sqrt{x^2 + y^2} \quad (3.4)$$

Equation 3.4 is the familiar Pythagorean theorem.

These four expressions relating the coordinates (x, y) to the coordinates (r, θ) apply only when θ is defined as shown in Figure 3.2a—in other words, when positive θ is an angle measured counterclockwise from the positive x axis. (Some scientific calculators perform conversions between Cartesian and polar coordinates based on these standard conventions.) If the reference axis for the polar angle θ is chosen to be one other than the positive x axis or if the sense of increasing θ is chosen differently, the expressions relating the two sets of coordinates will change.

Example 3.1 Polar Coordinates

The Cartesian coordinates of a point in the xy plane are $(x, y) = (-3.50, -2.50)$ m as shown in Figure 3.3. Find the polar coordinates of this point.

SOLUTION

Conceptualize The drawing in Figure 3.3 helps us conceptualize the problem. We wish to find r and θ . We expect r to be a few meters and θ to be larger than 180° .

Categorize Based on the statement of the problem and the Conceptualize step, we recognize that we are simply converting from Cartesian coordinates to polar coordinates. We therefore categorize this example as a substitution problem. Substitution problems generally do not have an extensive Analyze step other than the substitution of numbers into a given equation. Similarly, the Finalize step

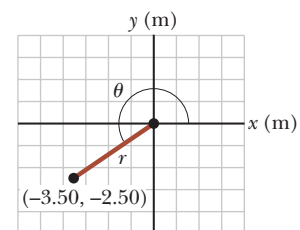


Figure 3.3 (Example 3.1) Finding polar coordinates when Cartesian coordinates are given.

3.1 continued

consists primarily of checking the units and making sure that the answer is reasonable and consistent with our expectations. Therefore, for substitution problems, we will not label Analyze or Finalize steps.

Use Equation 3.4 to find r :

$$r = \sqrt{x^2 + y^2} = \sqrt{(-3.50 \text{ m})^2 + (-2.50 \text{ m})^2} = 4.30 \text{ m}$$

Use Equation 3.3 to find θ :

$$\tan \theta = \frac{y}{x} = \frac{-2.50 \text{ m}}{-3.50 \text{ m}} = 0.714$$

$$\theta = 216^\circ$$

Notice that you must use the signs of x and y to find that the point lies in the third quadrant of the coordinate system. That is, $\theta = 216^\circ$, not 35.5° , whose tangent is also 0.714. Both answers agree with our expectations in the Conceptualize step.

3.2 Vector and Scalar Quantities

We now formally describe the difference between scalar quantities and vector quantities. When you want to know the temperature outside so that you will know how to dress, the only information you need is a number and the unit “degrees C” or “degrees F.” Temperature is therefore an example of a *scalar quantity*:

A **scalar quantity** is completely specified by a single value with an appropriate unit and has no direction.

Other examples of scalar quantities are volume, mass, speed, time, and time intervals. Some scalars are always positive, such as mass and speed. Others, such as temperature, can have either positive or negative values. The rules of ordinary arithmetic are used to manipulate scalar quantities.

If you are preparing to pilot a small plane and need to know the wind velocity, you must know both the speed of the wind and its direction. Because direction is important for its complete specification, velocity is a *vector quantity*:

A **vector quantity** is completely specified by a number with an appropriate unit (the *magnitude* of the vector) plus a direction.

Another example of a vector quantity is displacement, as you know from Chapter 2. Suppose a particle moves from some point $\textcircled{\text{A}}$ to some point $\textcircled{\text{B}}$ along a straight path as shown in Figure 3.4. We represent this displacement by drawing an arrow from $\textcircled{\text{A}}$ to $\textcircled{\text{B}}$, with the tip of the arrow pointing away from the starting point. The direction of the arrowhead represents the direction of the displacement, and the length of the arrow represents the magnitude of the displacement. If the particle travels along some other path from $\textcircled{\text{A}}$ to $\textcircled{\text{B}}$ such as shown by the broken line in Figure 3.4, its displacement is still the arrow drawn from $\textcircled{\text{A}}$ to $\textcircled{\text{B}}$. Displacement depends only on the initial and final positions, so the displacement vector is independent of the path taken by the particle between these two points.

In this text, we use a boldface letter with an arrow over the letter, such as $\vec{\mathbf{A}}$, to represent a vector. Another common notation for vectors with which you should be familiar is a simple boldface character: \mathbf{A} . The magnitude of the vector $\vec{\mathbf{A}}$ is written either A or $|\mathbf{A}|$. The magnitude of a vector has physical units, such as meters for displacement or meters per second for velocity. The magnitude of a vector is *always* a positive number.

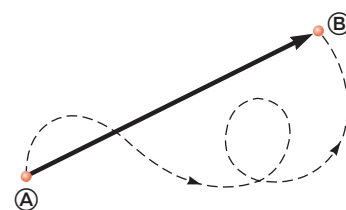


Figure 3.4 As a particle moves from $\textcircled{\text{A}}$ to $\textcircled{\text{B}}$ along an arbitrary path represented by the broken line, its displacement is a vector quantity shown by the arrow drawn from $\textcircled{\text{A}}$ to $\textcircled{\text{B}}$.

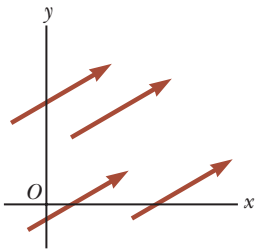


Figure 3.5 These four vectors are equal because they have equal lengths and point in the same direction.

Quick Quiz 3.1 Which of the following are vector quantities and which are scalar quantities? (a) your age (b) acceleration (c) velocity (d) speed (e) mass

3.3 Some Properties of Vectors

In this section, we shall investigate general properties of vectors representing physical quantities. We also discuss how to add and subtract vectors using both algebraic and geometric methods.

Equality of Two Vectors

For many purposes, two vectors \vec{A} and \vec{B} may be defined to be equal if they have the same magnitude and if they point in the same direction. That is, $\vec{A} = \vec{B}$ only if $A = B$ and if \vec{A} and \vec{B} point in the same direction along parallel lines. For example, all the vectors in Figure 3.5 are equal even though they have different starting points. This property allows us to move a vector to a position parallel to itself in a diagram without affecting the vector.

Pitfall Prevention 3.1

Vector Addition Versus Scalar Addition Notice that $\vec{A} + \vec{B} = \vec{C}$ is very different from $A + B = C$. The first equation is a vector sum, which must be handled carefully, such as with the graphical method. The second equation is a simple algebraic addition of numbers that is handled with the normal rules of arithmetic.

Adding Vectors

The rules for adding vectors are conveniently described by a graphical method. To add vector \vec{B} to vector \vec{A} , first draw vector \vec{A} on graph paper, with its magnitude represented by a convenient length scale, and then draw vector \vec{B} to the same scale, with its tail starting from the tip of \vec{A} , as shown in Figure 3.6. The **resultant vector** $\vec{R} = \vec{A} + \vec{B}$ is the vector drawn from the tail of \vec{A} to the tip of \vec{B} .

A geometric construction can also be used to add more than two vectors as shown in Figure 3.7 for the case of four vectors. The resultant vector $\vec{R} = \vec{A} + \vec{B} + \vec{C} + \vec{D}$ is the vector that completes the polygon. In other words, \vec{R} is the vector drawn from the tail of the first vector to the tip of the last vector. This technique for adding vectors is often called the “head to tail method.”

When two vectors are added, the sum is independent of the order of the addition. (This fact may seem trivial, but as you will see in Chapter 11, the order is important when vectors are multiplied. Procedures for multiplying vectors are discussed in Chapters 7 and 11.) This property, which can be seen from the geometric construction in Figure 3.8, is known as the **commutative law of addition**:

Commutative law of addition ►

$$\vec{A} + \vec{B} = \vec{B} + \vec{A} \quad (3.5)$$

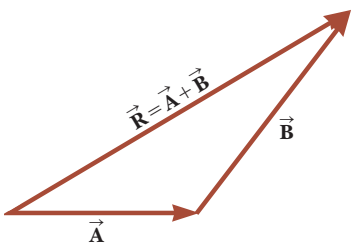


Figure 3.6 When vector \vec{B} is added to vector \vec{A} , the resultant \vec{R} is the vector that runs from the tail of \vec{A} to the tip of \vec{B} .

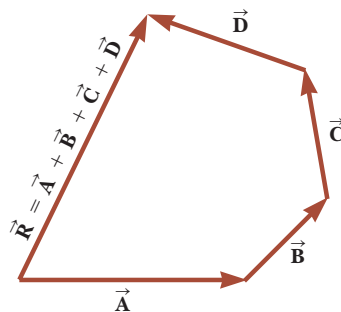


Figure 3.7 Geometric construction for summing four vectors. The resultant vector \vec{R} is by definition the one that completes the polygon.

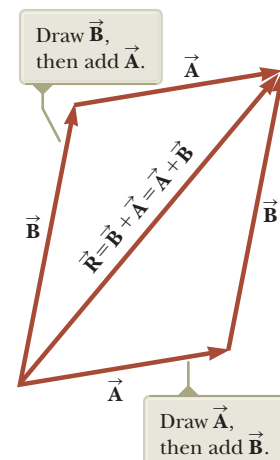


Figure 3.8 This construction shows that $\vec{A} + \vec{B} = \vec{B} + \vec{A}$ or, in other words, that vector addition is commutative.

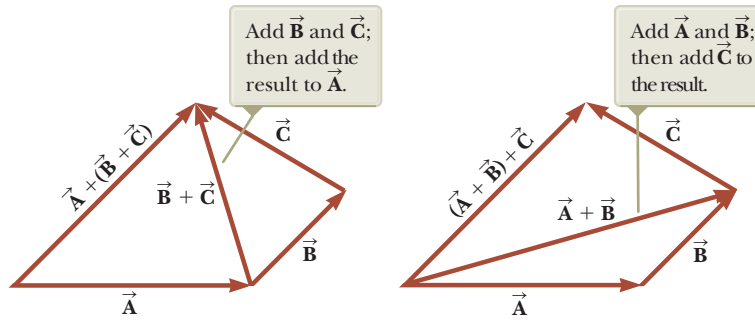


Figure 3.9 Geometric constructions for verifying the associative law of addition.

When three or more vectors are added, their sum is independent of the way in which the individual vectors are grouped together. A geometric proof of this rule for three vectors is given in Figure 3.9. This property is called the **associative law of addition**:

$$\vec{A} + (\vec{B} + \vec{C}) = (\vec{A} + \vec{B}) + \vec{C} \quad (3.6)$$

◀ Associative law of addition

In summary, a **vector quantity has both magnitude and direction and also obeys the laws of vector addition** as described in Figures 3.6 to 3.9. When two or more vectors are added together, they must all have the same units and they must all be the same type of quantity. It would be meaningless to add a velocity vector (for example, 60 km/h to the east) to a displacement vector (for example, 200 km to the north) because these vectors represent different physical quantities. The same rule also applies to scalars. For example, it would be meaningless to add time intervals to temperatures.

Negative of a Vector

The negative of the vector \vec{A} is defined as the vector that when added to \vec{A} gives zero for the vector sum. That is, $\vec{A} + (-\vec{A}) = 0$. The vectors \vec{A} and $-\vec{A}$ have the same magnitude but point in opposite directions.

Subtracting Vectors

The operation of vector subtraction makes use of the definition of the negative of a vector. We define the operation $\vec{A} - \vec{B}$ as vector $-\vec{B}$ added to vector \vec{A} :

$$\vec{A} - \vec{B} = \vec{A} + (-\vec{B}) \quad (3.7)$$

The geometric construction for subtracting two vectors in this way is illustrated in Figure 3.10a.

Another way of looking at vector subtraction is to notice that the difference $\vec{A} - \vec{B}$ between two vectors \vec{A} and \vec{B} is what you have to add to the second vector

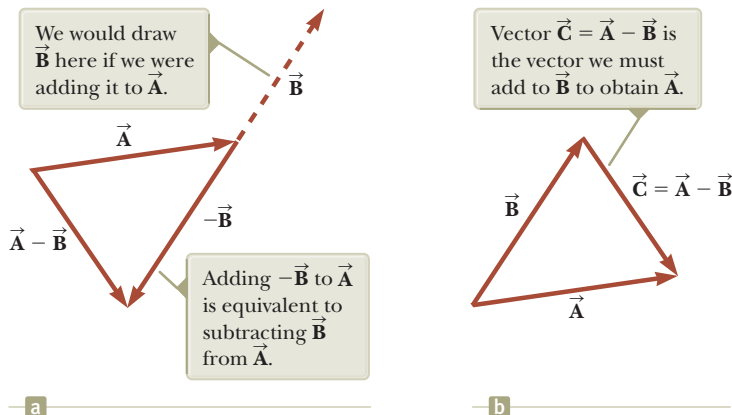


Figure 3.10 (a) Subtracting vector \vec{B} from vector \vec{A} . The vector $-\vec{B}$ is equal in magnitude to vector \vec{B} and points in the opposite direction. (b) A second way of looking at vector subtraction.

to obtain the first. In this case, as Figure 3.10b shows, the vector $\vec{A} - \vec{B}$ points from the tip of the second vector to the tip of the first.

Multiplying a Vector by a Scalar

If vector \vec{A} is multiplied by a positive scalar quantity m , the product $m\vec{A}$ is a vector that has the same direction as \vec{A} and magnitude mA . If vector \vec{A} is multiplied by a negative scalar quantity $-m$, the product $-m\vec{A}$ is directed opposite \vec{A} . For example, the vector $5\vec{A}$ is five times as long as \vec{A} and points in the same direction as \vec{A} ; the vector $-\frac{1}{3}\vec{A}$ is one-third the length of \vec{A} and points in the direction opposite \vec{A} .

Quick Quiz 3.2 The magnitudes of two vectors \vec{A} and \vec{B} are $A = 12$ units and $B = 8$ units. Which pair of numbers represents the *largest* and *smallest* possible values for the magnitude of the resultant vector $\vec{R} = \vec{A} + \vec{B}$? (a) 14.4 units, 4 units (b) 12 units, 8 units (c) 20 units, 4 units (d) none of these answers

Quick Quiz 3.3 If vector \vec{B} is added to vector \vec{A} , which *two* of the following choices must be true for the resultant vector to be equal to zero? (a) \vec{A} and \vec{B} are parallel and in the same direction. (b) \vec{A} and \vec{B} are parallel and in opposite directions. (c) \vec{A} and \vec{B} have the same magnitude. (d) \vec{A} and \vec{B} are perpendicular.

Example 3.2 A Vacation Trip

A car travels 20.0 km due north and then 35.0 km in a direction 60.0° west of north as shown in Figure 3.11a. Find the magnitude and direction of the car's resultant displacement.

SOLUTION

Conceptualize The vectors \vec{A} and \vec{B} drawn in Figure 3.11a help us conceptualize the problem. The resultant vector \vec{R} has also been drawn. We expect its magnitude to be a few tens of kilometers. The angle β that the resultant vector makes with the y axis is expected to be less than 60° , the angle that vector \vec{B} makes with the y axis.

Categorize We can categorize this example as a simple analysis problem in vector addition. The displacement \vec{R} is the resultant when the two individual displacements \vec{A} and \vec{B} are added. We can further categorize it as a problem about the analysis of triangles, so we appeal to our expertise in geometry and trigonometry.

Analyze In this example, we show two ways to analyze the problem of finding the resultant of two vectors. The first way is to solve the problem geometrically, using graph paper and a protractor to measure the magnitude of \vec{R} and its direction in Figure 3.11a. (In fact, even when you know you are going to be carrying out a calculation, you should sketch the vectors to check your results.) With an ordinary ruler and protractor, a large diagram typically gives answers to two-digit but not to three-digit precision. Try using these tools on \vec{R} in Figure 3.11a and compare to the trigonometric analysis below!

The second way to solve the problem is to analyze it using algebra and trigonometry. The magnitude of \vec{R} can be obtained from the law of cosines as applied to the triangle in Figure 3.11a (see Appendix B.4).

Use $R^2 = A^2 + B^2 - 2AB \cos \theta$ from the law of cosines to find R :

$$R = \sqrt{A^2 + B^2 - 2AB \cos \theta}$$

Substitute numerical values, noting that $\theta = 180^\circ - 60^\circ = 120^\circ$:

$$\begin{aligned} R &= \sqrt{(20.0 \text{ km})^2 + (35.0 \text{ km})^2 - 2(20.0 \text{ km})(35.0 \text{ km}) \cos 120^\circ} \\ &= 48.2 \text{ km} \end{aligned}$$

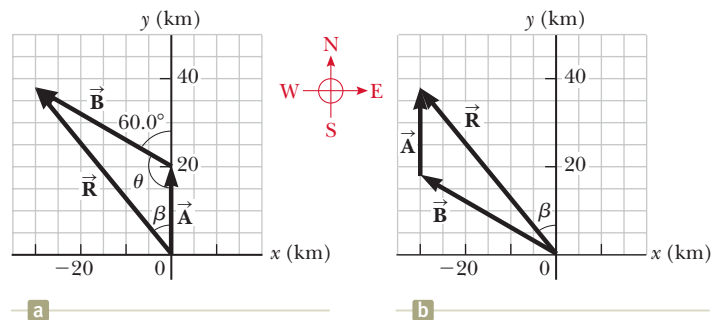


Figure 3.11 (Example 3.2) (a) Graphical method for finding the resultant displacement vector $\vec{R} = \vec{A} + \vec{B}$. (b) Adding the vectors in reverse order ($\vec{B} + \vec{A}$) gives the same result for \vec{R} .

3.2 continued

Use the law of sines (Appendix B.4) to find the direction of $\vec{\mathbf{R}}$ measured from the northerly direction:

$$\frac{\sin \beta}{B} = \frac{\sin \theta}{R}$$

$$\sin \beta = \frac{B}{R} \sin \theta = \frac{35.0 \text{ km}}{48.2 \text{ km}} \sin 120^\circ = 0.629$$

$$\beta = 38.9^\circ$$

The resultant displacement of the car is 48.2 km in a direction 38.9° west of north.

Finalize Does the angle β that we calculated agree with an estimate made by looking at Figure 3.11a or with an actual angle measured from the diagram using the graphical method? Is it reasonable that the magnitude of $\vec{\mathbf{R}}$ is larger than that of both $\vec{\mathbf{A}}$ and $\vec{\mathbf{B}}$? Are the units of $\vec{\mathbf{R}}$ correct?

Although the head to tail method of adding vectors works well, it suffers from two disadvantages. First, some

people find using the laws of cosines and sines to be awkward. Second, a triangle only results if you are adding two vectors. If you are adding three or more vectors, the resulting geometric shape is usually not a triangle. In Section 3.4, we explore a new method of adding vectors that will address both of these disadvantages.

WHAT IF? Suppose the trip were taken with the two vectors in reverse order: 35.0 km at 60.0° west of north first and then 20.0 km due north. How would the magnitude and the direction of the resultant vector change?

Answer They would not change. The commutative law for vector addition tells us that the order of vectors in an addition is irrelevant. Graphically, Figure 3.11b shows that the vectors added in the reverse order give us the same resultant vector.

3.4 Components of a Vector and Unit Vectors

The graphical method of adding vectors is not recommended whenever high accuracy is required or in three-dimensional problems. In this section, we describe a method of adding vectors that makes use of the projections of vectors along coordinate axes. These projections are called the **components** of the vector or its **rectangular components**. Any vector can be completely described by its components.

Consider a vector $\vec{\mathbf{A}}$ lying in the xy plane and making an arbitrary angle θ with the positive x axis as shown in Figure 3.12a. This vector can be expressed as the sum of two other *component vectors* $\vec{\mathbf{A}}_x$, which is parallel to the x axis, and $\vec{\mathbf{A}}_y$, which is parallel to the y axis. From Figure 3.12b, we see that the three vectors form a right triangle and that $\vec{\mathbf{A}} = \vec{\mathbf{A}}_x + \vec{\mathbf{A}}_y$. We shall often refer to the “components of a vector $\vec{\mathbf{A}}$,” written A_x and A_y (without the boldface notation). The component A_x represents the projection of $\vec{\mathbf{A}}$ along the x axis, and the component A_y represents the projection of $\vec{\mathbf{A}}$ along the y axis. These components can be positive or negative. The component A_x is positive if the component vector $\vec{\mathbf{A}}_x$ points in the positive x direction and is negative if $\vec{\mathbf{A}}_x$ points in the negative x direction. A similar statement is made for the component A_y .

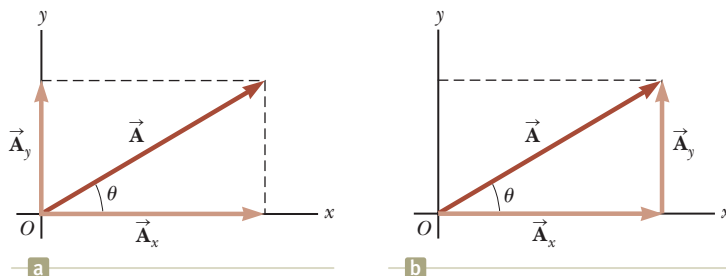


Figure 3.12 (a) A vector $\vec{\mathbf{A}}$ lying in the xy plane can be represented by its component vectors $\vec{\mathbf{A}}_x$ and $\vec{\mathbf{A}}_y$. (b) The y component vector $\vec{\mathbf{A}}_y$ can be moved to the right so that it adds to $\vec{\mathbf{A}}_x$. The vector sum of the component vectors is $\vec{\mathbf{A}}$. These three vectors form a right triangle.

Pitfall Prevention 3.2

x and y Components Equations 3.8 and 3.9 associate the cosine of the angle with the x component and the sine of the angle with the y component. This association is true *only* because we measured the angle θ with respect to the x axis, so do not memorize these equations. If θ is measured with respect to the y axis (as in some problems), these equations will be incorrect. Think about which side of the triangle containing the components is adjacent to the angle and which side is opposite and then assign the cosine and sine accordingly.

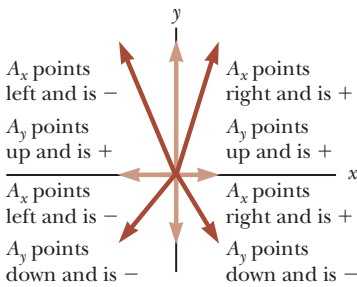


Figure 3.13 The signs of the components of a vector \vec{A} depend on the quadrant in which the vector is located.

From Figure 3.12 and the definition of sine and cosine, we see that $\cos \theta = A_x/A$ and that $\sin \theta = A_y/A$. Hence, the components of \vec{A} are

$$A_x = A \cos \theta \quad (3.8)$$

$$A_y = A \sin \theta \quad (3.9)$$

The magnitudes of these components are the lengths of the two sides of a right triangle with a hypotenuse of length A . Therefore, the magnitude and direction of \vec{A} are related to its components through the expressions

$$A = \sqrt{A_x^2 + A_y^2} \quad (3.10)$$

$$\theta = \tan^{-1}\left(\frac{A_y}{A_x}\right) \quad (3.11)$$

Notice that the signs of the components A_x and A_y depend on the angle θ . For example, if $\theta = 120^\circ$, A_x is negative and A_y is positive. If $\theta = 225^\circ$, both A_x and A_y are negative. Figure 3.13 summarizes the signs of the components when \vec{A} lies in the various quadrants.

When solving problems, you can specify a vector \vec{A} either with its components A_x and A_y or with its magnitude and direction A and θ .

Suppose you are working a physics problem that requires resolving a vector into its components. In many applications, it is convenient to express the components in a coordinate system having axes that are not horizontal and vertical but that are still perpendicular to each other. For example, we will consider the motion of objects sliding down inclined planes. For these examples, it is often convenient to orient the x axis parallel to the plane and the y axis perpendicular to the plane.

Quick Quiz 3.4 Choose the correct response to make the sentence true: A component of a vector is (a) always, (b) never, or (c) sometimes larger than the magnitude of the vector.

Unit Vectors

Vector quantities often are expressed in terms of unit vectors. A **unit vector** is a dimensionless vector having a magnitude of exactly 1. Unit vectors are used to specify a given direction and have no other physical significance. They are used solely as a bookkeeping convenience in describing a direction in space. We shall use the symbols \hat{i} , \hat{j} , and \hat{k} to represent unit vectors pointing in the positive x , y , and z directions, respectively. (The “hats,” or circumflexes, on the symbols are a standard notation for unit vectors.) The unit vectors \hat{i} , \hat{j} , and \hat{k} form a set of mutually perpendicular vectors in a right-handed coordinate system as shown in Figure 3.14a. The magnitude of each unit vector equals 1; that is, $|\hat{i}| = |\hat{j}| = |\hat{k}| = 1$.

Consider a vector \vec{A} lying in the xy plane as shown in Figure 3.14b. The product of the component A_x and the unit vector \hat{i} is the component vector $\vec{A}_x = A_x\hat{i}$,

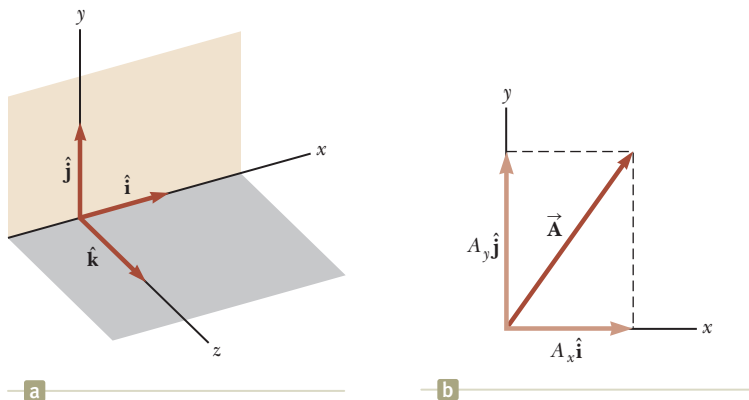


Figure 3.14 (a) The unit vectors \hat{i} , \hat{j} , and \hat{k} are directed along the x , y , and z axes, respectively. (b) Vector $\vec{A} = A_x\hat{i} + A_y\hat{j}$ lying in the xy plane has components A_x and A_y .

which lies on the x axis and has magnitude $|A_x|$. Likewise, $\vec{A}_y = A_y \hat{j}$ is the component vector of magnitude $|A_y|$ lying on the y axis. Therefore, the unit-vector notation for the vector \vec{A} is

$$\vec{A} = A_x \hat{i} + A_y \hat{j} \quad (3.12)$$

For example, consider a point lying in the xy plane and having Cartesian coordinates (x, y) as in Figure 3.15. The point can be specified by the **position vector** \vec{r} , which in unit-vector form is given by

$$\vec{r} = x \hat{i} + y \hat{j} \quad (3.13)$$

This notation tells us that the components of \vec{r} are the coordinates x and y .

Now let us see how to use components to add vectors when the graphical method is not sufficiently accurate. Suppose we wish to add vector \vec{B} to vector \vec{A} in Equation 3.12, where vector \vec{B} has components B_x and B_y . Because of the bookkeeping convenience of the unit vectors, all we do is add the x and y components separately. The resultant vector $\vec{R} = \vec{A} + \vec{B}$ is

$$\vec{R} = (A_x \hat{i} + A_y \hat{j}) + (B_x \hat{i} + B_y \hat{j})$$

or

$$\vec{R} = (A_x + B_x) \hat{i} + (A_y + B_y) \hat{j} \quad (3.14)$$

Because $\vec{R} = R_x \hat{i} + R_y \hat{j}$, we see that the components of the resultant vector are

$$\begin{aligned} R_x &= A_x + B_x \\ R_y &= A_y + B_y \end{aligned} \quad (3.15)$$

Therefore, we see that in the component method of adding vectors, we add all the x components together to find the x component of the resultant vector and use the same process for the y components. We can check this addition by components with a geometric construction as shown in Figure 3.16.

The magnitude of \vec{R} and the angle it makes with the x axis are obtained from its components using the relationships

$$R = \sqrt{R_x^2 + R_y^2} = \sqrt{(A_x + B_x)^2 + (A_y + B_y)^2} \quad (3.16)$$

$$\tan \theta = \frac{R_y}{R_x} = \frac{A_y + B_y}{A_x + B_x} \quad (3.17)$$

At times, we need to consider situations involving motion in three component directions. The extension of our methods to three-dimensional vectors is straightforward. If \vec{A} and \vec{B} both have x , y , and z components, they can be expressed in the form

$$\vec{A} = A_x \hat{i} + A_y \hat{j} + A_z \hat{k} \quad (3.18)$$

$$\vec{B} = B_x \hat{i} + B_y \hat{j} + B_z \hat{k} \quad (3.19)$$

The sum of \vec{A} and \vec{B} is

$$\vec{R} = (A_x + B_x) \hat{i} + (A_y + B_y) \hat{j} + (A_z + B_z) \hat{k} \quad (3.20)$$

Notice that Equation 3.20 differs from Equation 3.14: in Equation 3.20, the resultant vector also has a z component $R_z = A_z + B_z$. If a vector \vec{R} has x , y , and z components, the magnitude of the vector is $R = \sqrt{R_x^2 + R_y^2 + R_z^2}$. The angle θ_x that \vec{R} makes with the x axis is found from the expression $\cos \theta_x = R_x/R$, with similar expressions for the angles with respect to the y and z axes.

The extension of our method to adding more than two vectors is also straightforward. For example, $\vec{A} + \vec{B} + \vec{C} = (A_x + B_x + C_x) \hat{i} + (A_y + B_y + C_y) \hat{j} + (A_z + B_z + C_z) \hat{k}$. We have described adding displacement vectors in this section because these types of vectors are easy to visualize. We can also add other types of

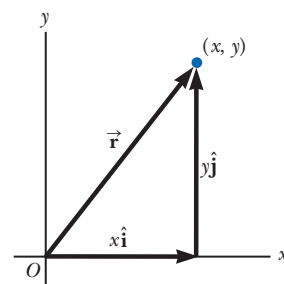


Figure 3.15 The point whose Cartesian coordinates are (x, y) can be represented by the position vector $\vec{r} = x \hat{i} + y \hat{j}$.

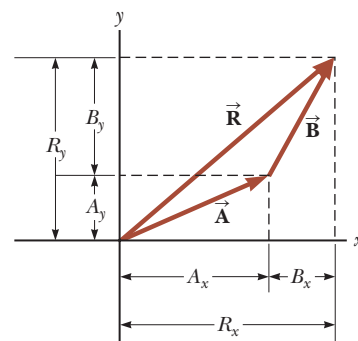


Figure 3.16 This geometric construction for the sum of two vectors shows the relationship between the components of the resultant \vec{R} and the components of the individual vectors.

Pitfall Prevention 3.3

Tangents on Calculators Equation 3.17 involves the calculation of an angle by means of a tangent function. Generally, the inverse tangent function on calculators provides an angle between -90° and $+90^\circ$. As a consequence, if the vector you are studying lies in the second or third quadrant, the angle measured from the positive x axis will be the angle your calculator returns plus 180° .

vectors, such as velocity, force, and electric field vectors, which we will do in later chapters.

- Quick Quiz 3.5** For which of the following vectors is the magnitude of the vector equal to one of the components of the vector? (a) $\vec{A} = 2\hat{i} + 5\hat{j}$
 (b) $\vec{B} = -3\hat{j}$ (c) $\vec{C} = +5\hat{k}$

Example 3.3 The Sum of Two Vectors

Find the sum of two displacement vectors \vec{A} and \vec{B} lying in the xy plane and given by

$$\vec{A} = (2.0\hat{i} + 2.0\hat{j}) \text{ m} \quad \text{and} \quad \vec{B} = (2.0\hat{i} - 4.0\hat{j}) \text{ m}$$

SOLUTION

Conceptualize You can conceptualize the situation by drawing the vectors on graph paper. Draw an approximation of the expected resultant vector.

Categorize We categorize this example as a simple substitution problem. Comparing this expression for \vec{A} with the general expression $\vec{A} = A_x\hat{i} + A_y\hat{j} + A_z\hat{k}$, we see that $A_x = 2.0 \text{ m}$, $A_y = 2.0 \text{ m}$, and $A_z = 0$. Likewise, $B_x = 2.0 \text{ m}$, $B_y = -4.0 \text{ m}$, and $B_z = 0$. We can use a two-dimensional approach because there are no z components.

Use Equation 3.14 to obtain the resultant vector \vec{R} :
$$\vec{R} = \vec{A} + \vec{B} = (2.0 + 2.0)\hat{i} \text{ m} + (2.0 - 4.0)\hat{j} \text{ m}$$

Evaluate the components of \vec{R} :
$$R_x = 4.0 \text{ m} \quad R_y = -2.0 \text{ m}$$

Use Equation 3.16 to find the magnitude of \vec{R} :
$$R = \sqrt{R_x^2 + R_y^2} = \sqrt{(4.0 \text{ m})^2 + (-2.0 \text{ m})^2} = \sqrt{20} \text{ m} = 4.5 \text{ m}$$

Find the direction of \vec{R} from Equation 3.17:
$$\tan \theta = \frac{R_y}{R_x} = \frac{-2.0 \text{ m}}{4.0 \text{ m}} = -0.50$$

Your calculator likely gives the answer -27° for $\theta = \tan^{-1}(-0.50)$. This answer is correct if we interpret it to mean 27° clockwise from the x axis. Our standard form has been to quote the angles measured counterclockwise from the $+x$ axis, and that angle for this vector is $\theta = 333^\circ$.

Example 3.4 The Resultant Displacement

A particle undergoes three consecutive displacements: $\Delta\vec{r}_1 = (15\hat{i} + 30\hat{j} + 12\hat{k}) \text{ cm}$, $\Delta\vec{r}_2 = (23\hat{i} - 14\hat{j} - 5.0\hat{k}) \text{ cm}$, and $\Delta\vec{r}_3 = (-13\hat{i} + 15\hat{j}) \text{ cm}$. Find unit-vector notation for the resultant displacement and its magnitude.

SOLUTION

Conceptualize Although x is sufficient to locate a point in one dimension, we need a vector \vec{r} to locate a point in two or three dimensions. The notation $\Delta\vec{r}$ is a generalization of the one-dimensional displacement Δx in Equation 2.1. Three-dimensional displacements are more difficult to conceptualize than those in two dimensions because they cannot be drawn on paper like the latter.

For this problem, let us imagine that you start with your pencil at the origin of a piece of graph paper on which you have drawn x and y axes. Move your pencil 15 cm to the right along the x axis, then 30 cm upward along the y axis, and then 12 cm *perpendicularly toward you away*

from the graph paper. This procedure provides the displacement described by $\Delta\vec{r}_1$. From this point, move your pencil 23 cm to the right parallel to the x axis, then 14 cm parallel to the graph paper in the $-y$ direction, and then 5.0 cm perpendicularly away from you toward the graph paper. You are now at the displacement from the origin described by $\Delta\vec{r}_1 + \Delta\vec{r}_2$. From this point, move your pencil 13 cm to the left in the $-x$ direction, and (finally!) 15 cm parallel to the graph paper along the y axis. Your final position is at a displacement $\Delta\vec{r}_1 + \Delta\vec{r}_2 + \Delta\vec{r}_3$ from the origin.

3.4 continued

Categorize Despite the difficulty in conceptualizing in three dimensions, we can categorize this problem as a substitution problem because of the careful bookkeeping methods that we have developed for vectors. The mathematical manipulation keeps track of this motion along the three perpendicular axes in an organized, compact way, as we see below.

To find the resultant displacement, add the three vectors:

$$\begin{aligned}\Delta\vec{r} &= \Delta\vec{r}_1 + \Delta\vec{r}_2 + \Delta\vec{r}_3 \\ &= (15 + 23 - 13)\hat{i} \text{ cm} + (30 - 14 + 15)\hat{j} \text{ cm} + (12 - 5.0 + 0)\hat{k} \text{ cm} \\ &= (25\hat{i} + 31\hat{j} + 7.0\hat{k}) \text{ cm}\end{aligned}$$

Find the magnitude of the resultant vector:

$$\begin{aligned}R &= \sqrt{R_x^2 + R_y^2 + R_z^2} \\ &= \sqrt{(25 \text{ cm})^2 + (31 \text{ cm})^2 + (7.0 \text{ cm})^2} = 40 \text{ cm}\end{aligned}$$

Example 3.5 Taking a Hike

A hiker begins a trip by first walking 25.0 km southeast from her car. She stops and sets up her tent for the night. On the second day, she walks 40.0 km in a direction 60.0° north of east, at which point she discovers a forest ranger's tower.

(A) Determine the components of the hiker's displacement for each day.

SOLUTION

Conceptualize We conceptualize the problem by drawing a sketch as in Figure 3.17. If we denote the displacement vectors on the first and second days by \vec{A} and \vec{B} , respectively, and use the car as the origin of coordinates, we obtain the vectors shown in Figure 3.17. The sketch allows us to estimate the resultant vector as shown.

Categorize Having drawn the resultant \vec{R} , we can now categorize this problem as one we've solved before: an addition of two vectors. You should now have a hint of the power of categorization in that many new problems are very similar to problems we have already solved if we are careful to conceptualize them. Once we have drawn the displacement vectors and categorized the problem, this problem is no longer about a hiker, a walk, a car, a tent, or a tower. It is a problem about vector addition, one that we have already solved.

Analyze Displacement \vec{A} has a magnitude of 25.0 km and is directed 45.0° below the positive x axis.

Find the components of \vec{A} using Equations 3.8 and 3.9:

$$\begin{aligned}A_x &= A \cos(-45.0^\circ) = (25.0 \text{ km})(0.707) = 17.7 \text{ km} \\ A_y &= A \sin(-45.0^\circ) = (25.0 \text{ km})(-0.707) = -17.7 \text{ km}\end{aligned}$$

The negative value of A_y indicates that the hiker walks in the negative y direction on the first day. The signs of A_x and A_y also are evident from Figure 3.17.

Find the components of \vec{B} using Equations 3.8 and 3.9:

$$\begin{aligned}B_x &= B \cos 60.0^\circ = (40.0 \text{ km})(0.500) = 20.0 \text{ km} \\ B_y &= B \sin 60.0^\circ = (40.0 \text{ km})(0.866) = 34.6 \text{ km}\end{aligned}$$

(B) Determine the components of the hiker's resultant displacement \vec{R} for the trip. Find an expression for \vec{R} in terms of unit vectors.

SOLUTION

Use Equation 3.15 to find the components of the resultant displacement $\vec{R} = \vec{A} + \vec{B}$:

$$\begin{aligned}R_x &= A_x + B_x = 17.7 \text{ km} + 20.0 \text{ km} = 37.7 \text{ km} \\ R_y &= A_y + B_y = -17.7 \text{ km} + 34.6 \text{ km} = 17.0 \text{ km}\end{aligned}$$

continued

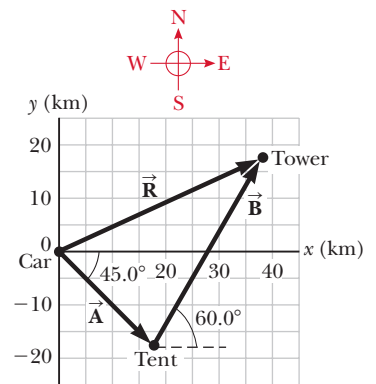


Figure 3.17 (Example 3.5) The total displacement of the hiker is the vector $\vec{R} = \vec{A} + \vec{B}$.

3.5 continued

Write the total displacement in unit-vector form:

$$\vec{\mathbf{R}} = (37.7\hat{\mathbf{i}} + 17.0\hat{\mathbf{j}}) \text{ km}$$

Finalize Looking at the graphical representation in Figure 3.17, we estimate the position of the tower to be about (38 km, 17 km), which is consistent with the components of $\vec{\mathbf{R}}$ in our result for the final position of the hiker. Also, both components of $\vec{\mathbf{R}}$ are positive, putting the final position in the first quadrant of the coordinate system, which is also consistent with Figure 3.17.

WHAT IF? After reaching the tower, the hiker wishes to return to her car along a single straight line. What are the components of the vector representing this hike? What should the direction of the hike be?

Answer The desired vector $\vec{\mathbf{R}}_{\text{car}}$ is the negative of vector $\vec{\mathbf{R}}$:

$$\vec{\mathbf{R}}_{\text{car}} = -\vec{\mathbf{R}} = (-37.7\hat{\mathbf{i}} - 17.0\hat{\mathbf{j}}) \text{ km}$$

The direction is found by calculating the angle that the vector makes with the x axis:

$$\tan \theta = \frac{R_{\text{car},y}}{R_{\text{car},x}} = \frac{-17.0 \text{ km}}{-37.7 \text{ km}} = 0.450$$

which gives an angle of $\theta = 204.2^\circ$, or 24.2° south of west.

Summary

Definitions

Scalar quantities are those that have only a numerical value and no associated direction.

Vector quantities have both magnitude and direction and obey the laws of vector addition. The magnitude of a vector is *always* a positive number.

Concepts and Principles

When two or more vectors are added together, they must all have the same units and they all must be the same type of quantity. We can add two vectors $\vec{\mathbf{A}}$ and $\vec{\mathbf{B}}$ graphically. In this method (Fig. 3.6), the resultant vector $\vec{\mathbf{R}} = \vec{\mathbf{A}} + \vec{\mathbf{B}}$ runs from the tail of $\vec{\mathbf{A}}$ to the tip of $\vec{\mathbf{B}}$.

If a vector $\vec{\mathbf{A}}$ has an x component A_x and a y component A_y , the vector can be expressed in unit-vector form as $\vec{\mathbf{A}} = A_x\hat{\mathbf{i}} + A_y\hat{\mathbf{j}}$. In this notation, $\hat{\mathbf{i}}$ is a unit vector pointing in the positive x direction and $\hat{\mathbf{j}}$ is a unit vector pointing in the positive y direction. Because $\hat{\mathbf{i}}$ and $\hat{\mathbf{j}}$ are unit vectors, $|\hat{\mathbf{i}}| = |\hat{\mathbf{j}}| = 1$.

A second method of adding vectors involves **components** of the vectors. The x component A_x of the vector $\vec{\mathbf{A}}$ is equal to the projection of $\vec{\mathbf{A}}$ along the x axis of a coordinate system, where $A_x = A \cos \theta$. The y component A_y of $\vec{\mathbf{A}}$ is the projection of $\vec{\mathbf{A}}$ along the y axis, where $A_y = A \sin \theta$.

We can find the resultant of two or more vectors by resolving all vectors into their x and y components, adding their resultant x and y components, and then using the Pythagorean theorem to find the magnitude of the resultant vector. We can find the angle that the resultant vector makes with respect to the x axis by using a suitable trigonometric function.

Objective Questions

 1. denotes answer available in *Student Solutions Manual/Study Guide*

- What is the magnitude of the vector $(10\hat{i} - 10\hat{k})$ m/s? (a) 0 (b) 10 m/s (c) -10 m/s (d) 10 (e) 14.1 m/s
- A vector lying in the xy plane has components of opposite sign. The vector must lie in which quadrant? (a) the first quadrant (b) the second quadrant (c) the third quadrant (d) the fourth quadrant (e) either the second or the fourth quadrant
- Figure OQ3.3 shows two vectors \vec{D}_1 and \vec{D}_2 . Which of the possibilities (a) through (d) is the vector $\vec{D}_2 - 2\vec{D}_1$, or (e) is it none of them?

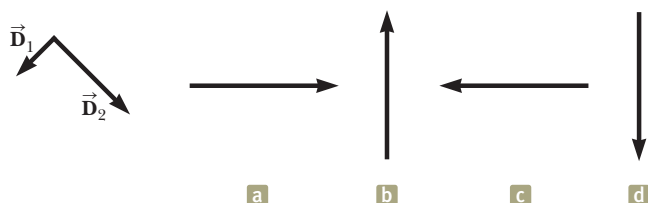


Figure OQ3.3

- The cutting tool on a lathe is given two displacements, one of magnitude 4 cm and one of magnitude 3 cm, in each one of five situations (a) through (e) diagrammed in Figure OQ3.4. Rank these situations according to the magnitude of the total displacement of the tool, putting the situation with the greatest resultant magnitude first. If the total displacement is the same size in two situations, give those letters equal ranks.

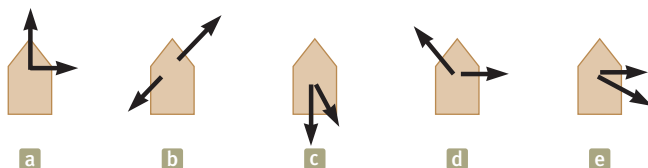


Figure OQ3.4

- The magnitude of vector \vec{A} is 8 km, and the magnitude of \vec{B} is 6 km. Which of the following are possible values for the magnitude of $\vec{A} + \vec{B}$? Choose all possible answers. (a) 10 km (b) 8 km (c) 2 km (d) 0 (e) -2 km
- Let vector \vec{A} point from the origin into the second quadrant of the xy plane and vector \vec{B} point from the origin into the fourth quadrant. The vector $\vec{B} - \vec{A}$

must be in which quadrant, (a) the first, (b) the second, (c) the third, or (d) the fourth, or (e) is more than one answer possible?

- Yes or no: Is each of the following quantities a vector? (a) force (b) temperature (c) the volume of water in a can (d) the ratings of a TV show (e) the height of a building (f) the velocity of a sports car (g) the age of the Universe
- What is the y component of the vector $(3\hat{i} - 8\hat{k})$ m/s? (a) 3 m/s (b) -8 m/s (c) 0 (d) 8 m/s (e) none of those answers
- What is the x component of the vector shown in Figure OQ3.9? (a) 3 cm (b) 6 cm (c) -4 cm (d) -6 cm (e) none of those answers

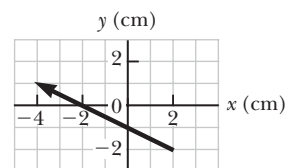


Figure OQ3.9 Objective Questions 9 and 10.

- What is the y component of the vector shown in Figure OQ3.9? (a) 3 cm (b) 6 cm (c) -4 cm (d) -6 cm (e) none of those answers
- Vector \vec{A} lies in the xy plane. Both of its components will be negative if it points from the origin into which quadrant? (a) the first quadrant (b) the second quadrant (c) the third quadrant (d) the fourth quadrant (e) the second or fourth quadrants
- A submarine dives from the water surface at an angle of 30° below the horizontal, following a straight path 50 m long. How far is the submarine then below the water surface? (a) 50 m (b) $(50 \text{ m})/\sin 30^\circ$ (c) $(50 \text{ m}) \sin 30^\circ$ (d) $(50 \text{ m}) \cos 30^\circ$ (e) none of those answers
- A vector points from the origin into the second quadrant of the xy plane. What can you conclude about its components? (a) Both components are positive. (b) The x component is positive, and the y component is negative. (c) The x component is negative, and the y component is positive. (d) Both components are negative. (e) More than one answer is possible.

Conceptual Questions

 1. denotes answer available in *Student Solutions Manual/Study Guide*

- Is it possible to add a vector quantity to a scalar quantity? Explain.
- Can the magnitude of a vector have a negative value? Explain.
- A book is moved once around the perimeter of a tabletop with the dimensions 1.0 m by 2.0 m. The book ends up at its initial position. (a) What is its displacement? (b) What is the distance traveled?

- If the component of vector \vec{A} along the direction of vector \vec{B} is zero, what can you conclude about the two vectors?
- On a certain calculator, the inverse tangent function returns a value between -90° and $+90^\circ$. In what cases will this value correctly state the direction of a vector in the xy plane, by giving its angle measured counterclockwise from the positive x axis? In what cases will it be incorrect?

Problems

WebAssign

The problems found in this chapter may be assigned online in Enhanced WebAssign

1. straightforward; 2. intermediate; 3. challenging

1. full solution available in the *Student Solutions Manual/Study Guide*

AMT Analysis Model tutorial available in Enhanced WebAssign

GP Guided Problem

M Master It tutorial available in Enhanced WebAssign

W Watch It video solution available in Enhanced WebAssign

Section 3.1 Coordinate Systems

1. The polar coordinates of a point are $r = 5.50$ m and $\theta = 240^\circ$. What are the Cartesian coordinates of this point?
2. The rectangular coordinates of a point are given by $(2, y)$, and its polar coordinates are $(r, 30^\circ)$. Determine (a) the value of y and (b) the value of r .
3. Two points in the xy plane have Cartesian coordinates $(2.00, -4.00)$ m and $(-3.00, 3.00)$ m. Determine (a) the distance between these points and (b) their polar coordinates.
4. Two points in a plane have polar coordinates $(2.50$ m, $30.0^\circ)$ and $(3.80$ m, $120.0^\circ)$. Determine (a) the Cartesian coordinates of these points and (b) the distance between them.
5. The polar coordinates of a certain point are $(r = 4.30$ cm, $\theta = 214^\circ)$. (a) Find its Cartesian coordinates x and y . Find the polar coordinates of the points with Cartesian coordinates (b) $(-x, y)$, (c) $(-2x, -2y)$, and (d) $(3x, -3y)$.
6. Let the polar coordinates of the point (x, y) be (r, θ) . Determine the polar coordinates for the points (a) $(-x, y)$, (b) $(-2x, -2y)$, and (c) $(3x, -3y)$.

Section 3.2 Vector and Scalar Quantities

Section 3.3 Some Properties of Vectors

7. A surveyor measures the distance across a straight river by the following method (Fig. P3.7). Starting directly across from a tree on the opposite bank, she walks $d = 100$ m along the riverbank to establish a baseline. Then she sights across to the tree. The angle from her baseline to the tree is $\theta = 35.0^\circ$. How wide is the river?

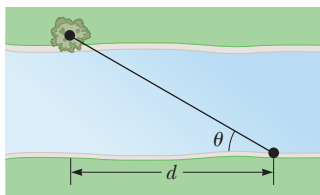


Figure P3.7

8. Vector \vec{A} has a magnitude of 29 units and points in the positive y direction. When vector \vec{B} is added to \vec{A} ,

the resultant vector $\vec{A} + \vec{B}$ points in the negative y direction with a magnitude of 14 units. Find the magnitude and direction of \vec{B} .

9. Why is the following situation impossible? A skater glides along a circular path. She defines a certain point on the circle as her origin. Later on, she passes through a point at which the distance she has traveled along the path from the origin is smaller than the magnitude of her displacement vector from the origin.

10. A force \vec{F}_1 of magnitude 6.00 units acts on an object at the origin in a direction $\theta = 30.0^\circ$ above the positive x axis (Fig. P3.10). A second force \vec{F}_2 of magnitude 5.00 units acts on the object in the direction of the positive y axis. Find graphically the magnitude and direction of the resultant force $\vec{F}_1 + \vec{F}_2$.

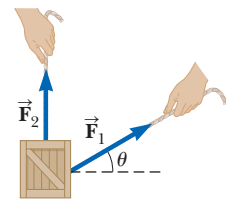


Figure P3.10

11. The displacement vectors \vec{A} and \vec{B} shown in Figure P3.11 both have magnitudes of 3.00 m. The direction of vector \vec{A} is $\theta = 30.0^\circ$. Find graphically (a) $\vec{A} + \vec{B}$, (b) $\vec{A} - \vec{B}$, (c) $\vec{B} - \vec{A}$, and (d) $\vec{A} - 2\vec{B}$. (Report all angles counterclockwise from the positive x axis.)

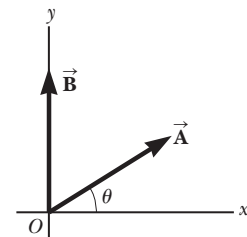


Figure P3.11

Problems 11 and 22.

12. Three displacements are $\vec{A} = 200$ m due south, $\vec{B} = 250$ m due west, and $\vec{C} = 150$ m at 30.0° east of north. (a) Construct a separate diagram for each of the following possible ways of adding these vectors; $\vec{R}_1 = \vec{A} + \vec{B} + \vec{C}$; $\vec{R}_2 = \vec{B} + \vec{C} + \vec{A}$; $\vec{R}_3 = \vec{C} + \vec{B} + \vec{A}$. (b) Explain what you can conclude from comparing the diagrams.

13. A roller-coaster car moves 200 ft horizontally and then rises 135 ft at an angle of 30.0° above the horizontal. It next travels 135 ft at an angle of 40.0° downward. What is its displacement from its starting point? Use graphical techniques.

14. A plane flies from base camp to Lake A, 280 km away in the direction 20.0° north of east. After dropping off supplies, it flies to Lake B, which is 190 km at 30.0° west of north from Lake A. Graphically determine the distance and direction from Lake B to the base camp.

Section 3.4 Components of a Vector and Unit Vectors

15. A vector has an x component of -25.0 units and a y component of 40.0 units. Find the magnitude and direction of this vector.
16. Vector \vec{A} has a magnitude of 35.0 units and points in the direction 325° counterclockwise from the positive x axis. Calculate the x and y components of this vector.
17. A minivan travels straight north in the right lane of a divided highway at 28.0 m/s. A camper passes the minivan and then changes from the left lane into the right lane. As it does so, the camper's path on the road is a straight displacement at 8.50° east of north. To avoid cutting off the minivan, the north-south distance between the camper's back bumper and the minivan's front bumper should not decrease. (a) Can the camper be driven to satisfy this requirement? (b) Explain your answer.
18. A person walks 25.0° north of east for 3.10 km. How far would she have to walk due north and due east to arrive at the same location?
19. Obtain expressions in component form for the position vectors having the polar coordinates (a) 12.8 m, 150° ; (b) 3.30 cm, 60.0° ; and (c) 22.0 in., 215° .
20. A girl delivering newspapers covers her route by traveling 3.00 blocks west, 4.00 blocks north, and then 6.00 blocks east. (a) What is her resultant displacement? (b) What is the total distance she travels?
21. While exploring a cave, a spelunker starts at the entrance and moves the following distances in a horizontal plane. She goes 75.0 m north, 250 m east, 125 m at an angle $\theta = 30.0^\circ$ north of east, and 150 m south. Find her resultant displacement from the cave entrance. Figure P3.21 suggests the situation but is not drawn to scale.

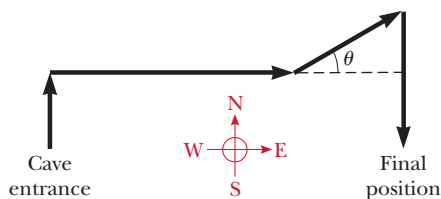


Figure P3.21

22. Use the component method to add the vectors \vec{A} and \vec{B} shown in Figure P3.11. Both vectors have magnitudes of 3.00 m and vector \vec{A} makes an angle of $\theta = 30.0^\circ$ with the x axis. Express the resultant $\vec{A} + \vec{B}$ in unit-vector notation.
23. Consider the two vectors $\vec{A} = 3\hat{i} - 2\hat{j}$ and $\vec{B} = -\hat{i} - 4\hat{j}$. Calculate (a) $\vec{A} + \vec{B}$, (b) $\vec{A} - \vec{B}$, (c) $|\vec{A} + \vec{B}|$, (d) $|\vec{A} - \vec{B}|$, and (e) the directions of $\vec{A} + \vec{B}$ and $\vec{A} - \vec{B}$.
24. A map suggests that Atlanta is 730 miles in a direction of 5.00° north of east from Dallas. The same map shows that Chicago is 560 miles in a direction of 21.0° west of north from Atlanta. Figure P3.24 shows the locations of these three cities. Modeling the Earth as flat, use

this information to find the displacement from Dallas to Chicago.



Figure P3.24

25. Your dog is running around the grass in your backyard. He undergoes successive displacements 3.50 m south, 8.20 m northeast, and 15.0 m west. What is the resultant displacement?
26. Given the vectors $\vec{A} = 2.00\hat{i} + 6.00\hat{j}$ and $\vec{B} = 3.00\hat{i} - 2.00\hat{j}$, (a) draw the vector sum $\vec{C} = \vec{A} + \vec{B}$ and the vector difference $\vec{D} = \vec{A} - \vec{B}$. (b) Calculate \vec{C} and \vec{D} , in terms of unit vectors. (c) Calculate \vec{C} and \vec{D} in terms of polar coordinates, with angles measured with respect to the positive x axis.
27. A novice golfer on the green takes three strokes to sink the ball. The successive displacements of the ball are 4.00 m to the north, 2.00 m northeast, and 1.00 m at 30.0° west of south (Fig. P3.27). Starting at the same initial point, an expert golfer could make the hole in what single displacement?

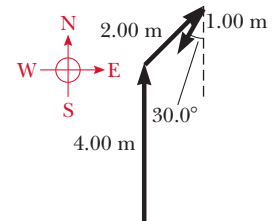


Figure P3.27

28. A snow-covered ski slope makes an angle of 35.0° with the horizontal. When a ski jumper plummets onto the hill, a parcel of splashed snow is thrown up to a maximum displacement of 1.50 m at 16.0° from the vertical in the uphill direction as shown in Figure P3.28. Find the components of its maximum displacement (a) parallel to the surface and (b) perpendicular to the surface.

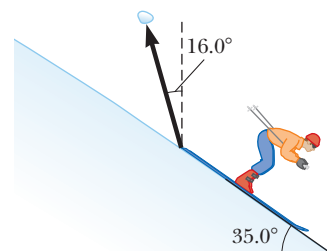


Figure P3.28

29. The helicopter view in Fig. P3.29 (page 74) shows two people pulling on a stubborn mule. The person on the right pulls with a force \vec{F}_1 of magnitude 120 N

and direction of $\theta_1 = 60.0^\circ$. The person on the left pulls with a force \vec{F}_2 of magnitude 80.0 N and direction of $\theta_2 = 75.0^\circ$. Find (a) the single force that is equivalent to the two forces shown and (b) the force that a third person would have to exert on the mule to make the resultant force equal to zero. The forces are measured in units of newtons (symbolized N).

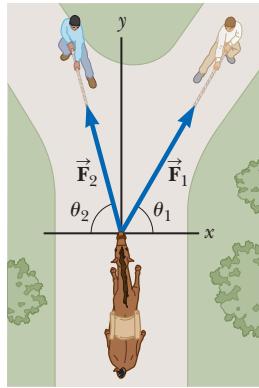


Figure P3.29

30. In a game of American football, a quarterback takes the ball from the line of scrimmage, runs backward a distance of 10.0 yards, and then runs sideways parallel to the line of scrimmage for 15.0 yards. At this point, he throws a forward pass downfield 50.0 yards perpendicular to the line of scrimmage. What is the magnitude of the football's resultant displacement?
31. Consider the three displacement vectors $\vec{A} = (3\hat{i} - 3\hat{j})$ m, $\vec{B} = (\hat{i} - 4\hat{j})$ m, and $\vec{C} = (-2\hat{i} + 5\hat{j})$ m. Use the component method to determine (a) the magnitude and direction of $\vec{D} = \vec{A} + \vec{B} + \vec{C}$ and (b) the magnitude and direction of $\vec{E} = -\vec{A} - \vec{B} + \vec{C}$.
32. Vector \vec{A} has x and y components of -8.70 cm and 15.0 cm, respectively; vector \vec{B} has x and y components of 13.2 cm and -6.60 cm, respectively. If $\vec{A} - \vec{B} + 3\vec{C} = 0$, what are the components of \vec{C} ?
33. The vector \vec{A} has x , y , and z components of 8.00, 12.0, and -4.00 units, respectively. (a) Write a vector expression for \vec{A} in unit-vector notation. (b) Obtain a unit-vector expression for a vector \vec{B} one-fourth the length of \vec{A} pointing in the same direction as \vec{A} . (c) Obtain a unit-vector expression for a vector \vec{C} three times the length of \vec{A} pointing in the direction opposite the direction of \vec{A} .
34. Vector \vec{B} has x , y , and z components of 4.00, 6.00, and 3.00 units, respectively. Calculate (a) the magnitude of \vec{B} and (b) the angle that \vec{B} makes with each coordinate axis.
35. Vector \vec{A} has a negative x component 3.00 units in length and a positive y component 2.00 units in length. (a) Determine an expression for \vec{A} in unit-vector notation. (b) Determine the magnitude and direction of \vec{A} . (c) What vector \vec{B} when added to \vec{A} gives a resultant vector with no x component and a negative y component 4.00 units in length?
36. Given the displacement vectors $\vec{A} = (3\hat{i} - 4\hat{j} + 4\hat{k})$ m and $\vec{B} = (2\hat{i} + 3\hat{j} - 7\hat{k})$ m, find the magnitudes of the following vectors and express each in terms of its rectangular components. (a) $\vec{C} = \vec{A} + \vec{B}$ (b) $\vec{D} = 2\vec{A} - \vec{B}$
37. (a) Taking $\vec{A} = (6.00\hat{i} - 8.00\hat{j})$ units, $\vec{B} = (-8.00\hat{i} + 3.00\hat{j})$ units, and $\vec{C} = (26.0\hat{i} + 19.0\hat{j})$ units, determine a and b such that $a\vec{A} + b\vec{B} + \vec{C} = 0$. (b) A

student has learned that a single equation cannot be solved to determine values for more than one unknown in it. How would you explain to him that both a and b can be determined from the single equation used in part (a)?

38. Three displacement vectors of a croquet ball are shown in Figure P3.38, where $|\vec{A}| = 20.0$ units, $|\vec{B}| = 40.0$ units, and $|\vec{C}| = 30.0$ units. Find (a) the resultant in unit-vector notation and (b) the magnitude and direction of the resultant displacement.

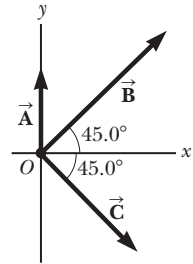


Figure P3.38

39. A man pushing a mop across a floor causes it to undergo two displacements. The first has a magnitude of 150 cm and makes an angle of 120° with the positive x axis. The resultant displacement has a magnitude of 140 cm and is directed at an angle of 35.0° to the positive x axis. Find the magnitude and direction of the second displacement.
40. Figure P3.40 illustrates typical proportions of male (m) and female (f) anatomies. The displacements \vec{d}_{1m} and \vec{d}_{1f} from the soles of the feet to the navel have magnitudes of 104 cm and 84.0 cm, respectively. The displacements \vec{d}_{2m} and \vec{d}_{2f} from the navel to outstretched fingertips have magnitudes of 100 cm and 86.0 cm, respectively. Find the vector sum of these displacements $\vec{d}_3 = \vec{d}_1 + \vec{d}_2$ for both people.

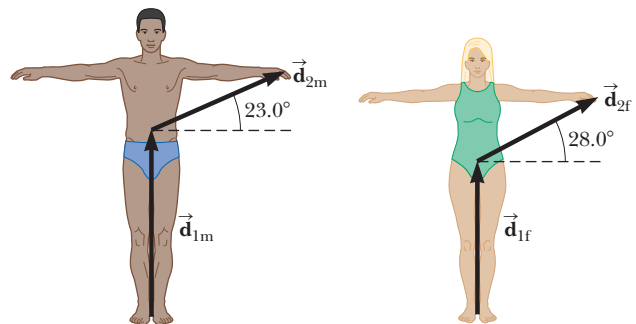


Figure P3.40

41. Express in unit-vector notation the following vectors, each of which has magnitude 17.0 cm. (a) Vector \vec{E} is directed 27.0° counterclockwise from the positive x axis. (b) Vector \vec{F} is directed 27.0° counterclockwise from the positive y axis. (c) Vector \vec{G} is directed 27.0° clockwise from the negative y axis.
42. A radar station locates a sinking ship at range 17.3 km and bearing 136° clockwise from north. From the same station, a rescue plane is at horizontal range 19.6 km, 153° clockwise from north, with elevation 2.20 km. (a) Write the position vector for the ship relative to the plane, letting \hat{i} represent east, \hat{j} north, and \hat{k} up. (b) How far apart are the plane and ship?
43. **Review.** As it passes over Grand Bahama Island, the eye of a hurricane is moving in a direction 60.0° north of west with a speed of 41.0 km/h. (a) What is the unit-vector expression for the velocity of the hurricane?

It maintains this velocity for 3.00 h, at which time the course of the hurricane suddenly shifts due north, and its speed slows to a constant 25.0 km/h. This new velocity is maintained for 1.50 h. (b) What is the unit-vector expression for the new velocity of the hurricane? (c) What is the unit-vector expression for the displacement of the hurricane during the first 3.00 h? (d) What is the unit-vector expression for the displacement of the hurricane during the latter 1.50 h? (e) How far from Grand Bahama is the eye 4.50 h after it passes over the island?

44. *Why is the following situation impossible?* A shopper pushing a cart through a market follows directions to the canned goods and moves through a displacement $8.00\hat{i}$ m down one aisle. He then makes a 90.0° turn and moves 3.00 m along the y axis. He then makes another 90.0° turn and moves 4.00 m along the x axis. *Every* shopper who follows these directions correctly ends up 5.00 m from the starting point.

45. **Review.** You are standing on the ground at the origin of a coordinate system. An airplane flies over you with constant velocity parallel to the x axis and at a fixed height of 7.60×10^3 m. At time $t = 0$, the airplane is directly above you so that the vector leading from you to it is $\vec{P}_0 = 7.60 \times 10^3\hat{j}$ m. At $t = 30.0$ s, the position vector leading from you to the airplane is $\vec{P}_{30} = (8.04 \times 10^3\hat{i} + 7.60 \times 10^3\hat{j})$ m as suggested in Figure P3.45. Determine the magnitude and orientation of the airplane's position vector at $t = 45.0$ s.

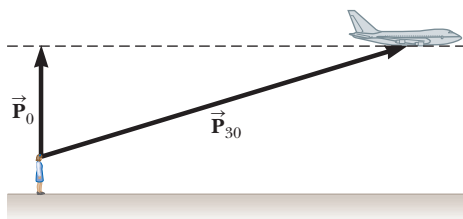


Figure P3.45

46. In Figure P3.46, the line segment represents a path from the point with position vector $(5\hat{i} + 3\hat{j})$ m to the point with location $(16\hat{i} + 12\hat{j})$ m. Point \textcircled{A} is along this path, a fraction f of the way to the destination. (a) Find the position vector of point \textcircled{A} in terms of f . (b) Evaluate the expression from part (a) for $f = 0$. (c) Explain whether the result in part (b) is reasonable. (d) Evaluate the expression for $f = 1$. (e) Explain whether the result in part (d) is reasonable.

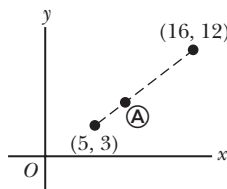


Figure P3.46 Point \textcircled{A} is a fraction f of the distance from the initial point $(5, 3)$ to the final point $(16, 12)$.

47. In an assembly operation illustrated in Figure P3.47, a robot moves an object first straight upward and then also to the east, around an arc forming one-quarter of a circle of radius 4.80 cm that lies in an east–west vertical plane. The robot then moves the object upward and to the north, through one-quarter of a

circle of radius 3.70 cm that lies in a north–south vertical plane. Find (a) the magnitude of the total displacement of the object and (b) the angle the total displacement makes with the vertical.

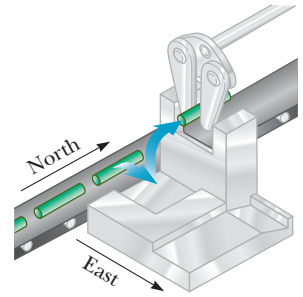


Figure P3.47

Additional Problems

48. **W** A fly lands on one wall of a room. The lower-left corner of the wall is selected as the origin of a two-dimensional Cartesian coordinate system. If the fly is located at the point having coordinates $(2.00, 1.00)$ m, (a) how far is it from the origin? (b) What is its location in polar coordinates?

49. As she picks up her riders, a bus driver traverses four successive displacements represented by the expression $(-6.30 b)\hat{i} - (4.00 b \cos 40^\circ)\hat{i} - (4.00 b \sin 40^\circ)\hat{j} + (3.00 b \cos 50^\circ)\hat{i} - (3.00 b \sin 50^\circ)\hat{j} - (5.00 b)\hat{j}$

Here b represents one city block, a convenient unit of distance of uniform size; \hat{i} is east; and \hat{j} is north. The displacements at 40° and 50° represent travel on roadways in the city that are at these angles to the main east–west and north–south streets. (a) Draw a map of the successive displacements. (b) What total distance did she travel? (c) Compute the magnitude and direction of her total displacement. The logical structure of this problem and of several problems in later chapters was suggested by Alan Van Heuvelen and David Maloney, *American Journal of Physics* **67**(3) 252–256, March 1999.

50. A jet airliner, moving initially at 300 mi/h to the east, suddenly enters a region where the wind is blowing at 100 mi/h toward the direction 30.0° north of east. What are the new speed and direction of the aircraft relative to the ground?

51. **M** A person going for a walk follows the path shown in Figure P3.51. The total trip consists of four straight-line paths. At the end of the walk, what is the person's resultant displacement measured from the starting point?

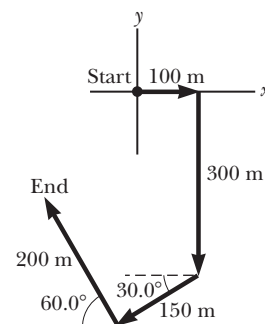


Figure P3.51

52. Find the horizontal and vertical components of the 100-m displacement of a superhero who flies from the

top of a tall building following the path shown in Figure P3.52.

53. Review. The biggest stuffed animal in the world is a snake 420 m long, constructed by Norwegian children. Suppose the snake is laid out in a park as shown in Figure P3.53, forming two straight sides of a 105° angle, with one side 240 m long. Olaf and Inge run a race they invent. Inge runs directly from the tail of the snake to its head, and Olaf starts from the same place at the same moment but runs along the snake.

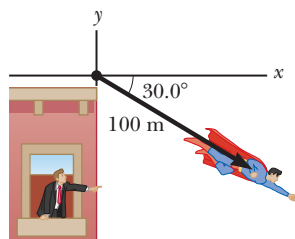


Figure P3.52

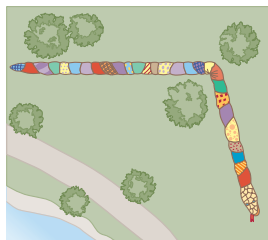


Figure P3.53

(a) If both children run steadily at 12.0 km/h, Inge reaches the head of the snake how much earlier than Olaf? (b) If Inge runs the race again at a constant speed of 12.0 km/h, at what constant speed must Olaf run to reach the end of the snake at the same time as Inge?

54. An air-traffic controller observes two aircraft on his radar screen. The first is at altitude 800 m, horizontal distance 19.2 km, and 25.0° south of west. The second aircraft is at altitude 1100 m, horizontal distance 17.6 km, and 20.0° south of west. What is the distance between the two aircraft? (Place the x axis west, the y axis south, and the z axis vertical.)

55. In Figure P3.55, a spider is resting after starting to spin its web. The gravitational force on the spider makes it exert a downward force of 0.150 N on the junction of the three strands of silk. The junction is supported by different tension forces in the two strands above it so that the resultant force on the junction is zero. The two sloping strands are perpendicular, and we have chosen the x and y directions to be along them. The tension T_x is 0.127 N. Find (a) the tension T_y , (b) the angle the x axis makes with the horizontal, and (c) the angle the y axis makes with the horizontal.

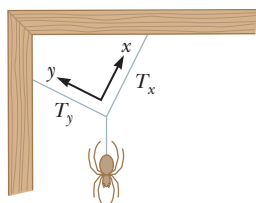


Figure P3.55

56. The rectangle shown in Figure P3.56 has sides parallel to the x and y axes. The position vectors of two corners are $\vec{A} = 10.0$ m at 50.0° and $\vec{B} = 12.0$ m at 30.0° . (a) Find the perimeter of the rectangle. (b) Find the magnitude and direction of the vector from the origin to the upper-right corner of the rectangle.

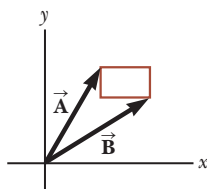


Figure P3.56

57. A vector is given by $\vec{R} = 2\hat{i} + \hat{j} + 3\hat{k}$. Find (a) the magnitudes of the x , y , and z components; (b) the magnitude of \vec{R} ; and (c) the angles between \vec{R} and the x , y , and z axes.

58. A ferry transports tourists between three islands. It sails from the first island to the second island, 4.76 km away, in a direction 37.0° north of east. It then sails from the second island to the third island in a direction 69.0° west of north. Finally it returns to the first island, sailing in a direction 28.0° east of south. Calculate the distance between (a) the second and third islands and (b) the first and third islands.

59. Two vectors \vec{A} and \vec{B} have precisely equal magnitudes. For the magnitude of $\vec{A} + \vec{B}$ to be 100 times larger than the magnitude of $\vec{A} - \vec{B}$, what must be the angle between them?

60. Two vectors \vec{A} and \vec{B} have precisely equal magnitudes. For the magnitude of $\vec{A} + \vec{B}$ to be larger than the magnitude of $\vec{A} - \vec{B}$ by the factor n , what must be the angle between them?

61. Let $\vec{A} = 60.0$ cm at 270° measured from the horizontal. Let $\vec{B} = 80.0$ cm at some angle θ . (a) Find the magnitude of $\vec{A} + \vec{B}$ as a function of θ . (b) From the answer to part (a), for what value of θ does $|\vec{A} + \vec{B}|$ take on its maximum value? What is this maximum value? (c) From the answer to part (a), for what value of θ does $|\vec{A} + \vec{B}|$ take on its minimum value? What is this minimum value? (d) Without reference to the answer to part (a), argue that the answers to each of parts (b) and (c) do or do not make sense.

62. After a ball rolls off the edge of a horizontal table at time $t = 0$, its velocity as a function of time is given by

$$\vec{v} = 1.2\hat{i} - 9.8t\hat{j}$$

where \vec{v} is in meters per second and t is in seconds. The ball's displacement away from the edge of the table, during the time interval of 0.380 s for which the ball is in flight, is given by

$$\Delta\vec{r} = \int_0^{0.380\text{ s}} \vec{v} dt$$

To perform the integral, you can use the calculus theorem

$$\int [A + Bf(x)] dx = \int A dx + B \int f(x) dx$$

You can think of the units and unit vectors as constants, represented by A and B . Perform the integration to calculate the displacement of the ball from the edge of the table at 0.380 s.

63. Review. The instantaneous position of an object is specified by its position vector leading from a fixed origin to the location of the object, modeled as a particle. Suppose for a certain object the position vector is a function of time given by $\vec{r} = 4\hat{i} + 3\hat{j} - 2t\hat{k}$, where \vec{r} is in meters and t is in seconds. (a) Evaluate $d\vec{r}/dt$. (b) What physical quantity does $d\vec{r}/dt$ represent about the object?

64. Ecotourists use their global positioning system indicator to determine their location inside a botanical garden as latitude $0.002\ 43$ degree south of the equator, longitude $75.642\ 38$ degrees west. They wish to visit a tree at latitude $0.001\ 62$ degree north, longitude $75.644\ 26$ degrees west. (a) Determine the straight-line distance and the direction in which they can walk to reach the tree as follows. First model the Earth as a sphere of radius 6.37×10^6 m to determine the westward and northward displacement components required, in meters. Then model the Earth as a flat surface to complete the calculation. (b) Explain why it is possible to use these two geometrical models together to solve the problem.
65. A rectangular parallelepiped has dimensions a , b , and c as shown in Figure P3.65. (a) Obtain a vector expression for the face diagonal vector \vec{R}_1 . (b) What is the magnitude of this vector? (c) Notice that \vec{R}_1 , $c\hat{k}$, and \vec{R}_2 make a right triangle. Obtain a vector expression for the body diagonal vector \vec{R}_2 .

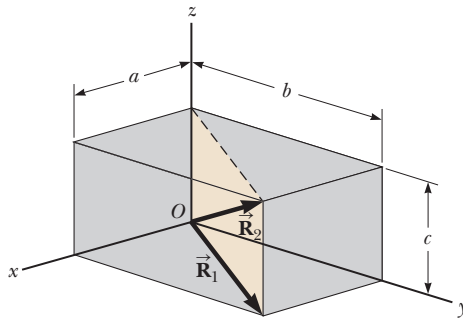


Figure P3.65

66. Vectors \vec{A} and \vec{B} have equal magnitudes of 5.00 . The sum of \vec{A} and \vec{B} is the vector $6.00\hat{j}$. Determine the angle between \vec{A} and \vec{B} .

Challenge Problem

67. A pirate has buried his treasure on an island with five trees located at the points $(30.0\text{ m}, -20.0\text{ m})$, $(60.0\text{ m}, 80.0\text{ m})$, $(-10.0\text{ m}, -10.0\text{ m})$, $(40.0\text{ m}, -30.0\text{ m})$, and $(-70.0\text{ m}, 60.0\text{ m})$, all measured relative to some origin, as shown in Figure P3.67. His ship's log instructs you to start at tree A and move toward tree B , but to cover only one-half the distance between A and B . Then move toward tree C , covering one-third the distance between your current location and C . Next move toward tree D , covering one-fourth the distance between where you are and D . Finally move toward tree E , covering one-fifth the distance between you and E , stop, and dig. (a) Assume you have correctly determined the order in which the pirate labeled the trees as A , B , C , D , and E as shown in the figure. What are the coordinates of the point where his treasure is buried? (b) **What If?** What if you do not really know the way the pirate labeled the trees? What would happen to the answer if you rearranged the order of the trees, for instance, to B $(30\text{ m}, -20\text{ m})$, A $(60\text{ m}, 80\text{ m})$, E $(-10\text{ m}, -10\text{ m})$, C $(40\text{ m}, -30\text{ m})$, and D $(-70\text{ m}, 60\text{ m})$? State reasoning to show that the answer does not depend on the order in which the trees are labeled.

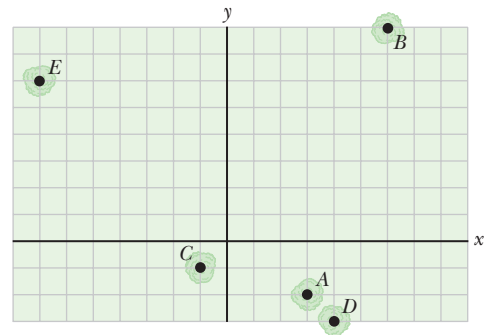


Figure P3.67

Motion in Two Dimensions

- 4.1 The Position, Velocity, and Acceleration Vectors
- 4.2 Two-Dimensional Motion with Constant Acceleration
- 4.3 Projectile Motion
- 4.4 Analysis Model: Particle in Uniform Circular Motion
- 4.5 Tangential and Radial Acceleration
- 4.6 Relative Velocity and Relative Acceleration



Fireworks erupt from the Sydney Harbour Bridge in New South Wales, Australia. Notice the parabolic paths of embers projected into the air. All projectiles follow a parabolic path in the absence of air resistance. (Graham Monro/Photolibrary/Jupiter Images)

In this chapter, we explore the kinematics of a particle moving in two dimensions.

Knowing the basics of two-dimensional motion will allow us—in future chapters—to examine a variety of situations, ranging from the motion of satellites in orbit to the motion of electrons in a uniform electric field. We begin by studying in greater detail the vector nature of position, velocity, and acceleration. We then treat projectile motion and uniform circular motion as special cases of motion in two dimensions. We also discuss the concept of relative motion, which shows why observers in different frames of reference may measure different positions and velocities for a given particle.

4.1 The Position, Velocity, and Acceleration Vectors

In Chapter 2, we found that the motion of a particle along a straight line such as the x axis is completely known if its position is known as a function of time. Let us now extend this idea to two-dimensional motion of a particle in the xy plane. We begin by describing the position of the particle. In one dimension, a single numerical value describes a particle's position, but in two dimensions, we indicate its position by its **position vector** \vec{r} , drawn from the origin of some coordinate system to the location of the particle in the xy plane as in Figure 4.1. At time t_i , the particle is at point **A**, described by position vector \vec{r}_i . At some later time t_f , it is at point **B**, described by position vector \vec{r}_f . The path followed by the particle from

Ⓐ to Ⓑ is not necessarily a straight line. As the particle moves from Ⓐ to Ⓑ in the time interval $\Delta t = t_f - t_i$, its position vector changes from \vec{r}_i to \vec{r}_f . As we learned in Chapter 2, displacement is a vector, and the displacement of the particle is the difference between its final position and its initial position. We now define the **displacement vector** $\Delta\vec{r}$ for a particle such as the one in Figure 4.1 as being the difference between its final position vector and its initial position vector:

$$\Delta\vec{r} \equiv \vec{r}_f - \vec{r}_i \quad (4.1)$$

The direction of $\Delta\vec{r}$ is indicated in Figure 4.1. As we see from the figure, the magnitude of $\Delta\vec{r}$ is *less* than the distance traveled along the curved path followed by the particle.

As we saw in Chapter 2, it is often useful to quantify motion by looking at the displacement divided by the time interval during which that displacement occurs, which gives the rate of change of position. Two-dimensional (or three-dimensional) kinematics is similar to one-dimensional kinematics, but we must now use full vector notation rather than positive and negative signs to indicate the direction of motion.

We define the **average velocity** \vec{v}_{avg} of a particle during the time interval Δt as the displacement of the particle divided by the time interval:

$$\vec{v}_{\text{avg}} \equiv \frac{\Delta\vec{r}}{\Delta t} \quad (4.2)$$

Multiplying or dividing a vector quantity by a positive scalar quantity such as Δt changes only the magnitude of the vector, not its direction. Because displacement is a vector quantity and the time interval is a positive scalar quantity, we conclude that the average velocity is a vector quantity directed along $\Delta\vec{r}$. Compare Equation 4.2 with its one-dimensional counterpart, Equation 2.2.

The average velocity between points is *independent of the path* taken. That is because average velocity is proportional to displacement, which depends only on the initial and final position vectors and not on the path taken. As with one-dimensional motion, we conclude that if a particle starts its motion at some point and returns to this point via any path, its average velocity is zero for this trip because its displacement is zero. Consider again our basketball players on the court in Figure 2.2 (page 23). We previously considered only their one-dimensional motion back and forth between the baskets. In reality, however, they move over a two-dimensional surface, running back and forth between the baskets as well as left and right across the width of the court. Starting from one basket, a given player may follow a very complicated two-dimensional path. Upon returning to the original basket, however, a player's average velocity is zero because the player's displacement for the whole trip is zero.

Consider again the motion of a particle between two points in the xy plane as shown in Figure 4.2 (page 80). The dashed curve shows the path of the particle. As the time interval over which we observe the motion becomes smaller and smaller—that is, as Ⓑ is moved to Ⓑ' and then to Ⓑ'' and so on—the direction of the displacement approaches that of the line tangent to the path at Ⓐ. The **instantaneous velocity** \vec{v} is defined as the limit of the average velocity $\Delta\vec{r}/\Delta t$ as Δt approaches zero:

$$\vec{v} \equiv \lim_{\Delta t \rightarrow 0} \frac{\Delta\vec{r}}{\Delta t} = \frac{d\vec{r}}{dt} \quad (4.3)$$

That is, the instantaneous velocity equals the derivative of the position vector with respect to time. The direction of the instantaneous velocity vector at any point in a particle's path is along a line tangent to the path at that point and in the direction of motion. Compare Equation 4.3 with the corresponding one-dimensional version, Equation 2.5.

The magnitude of the instantaneous velocity vector $v = |\vec{v}|$ of a particle is called the *speed* of the particle, which is a scalar quantity.

◀ Displacement vector

◀ Average velocity

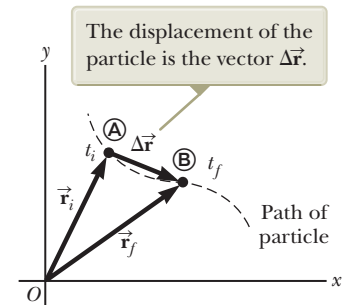
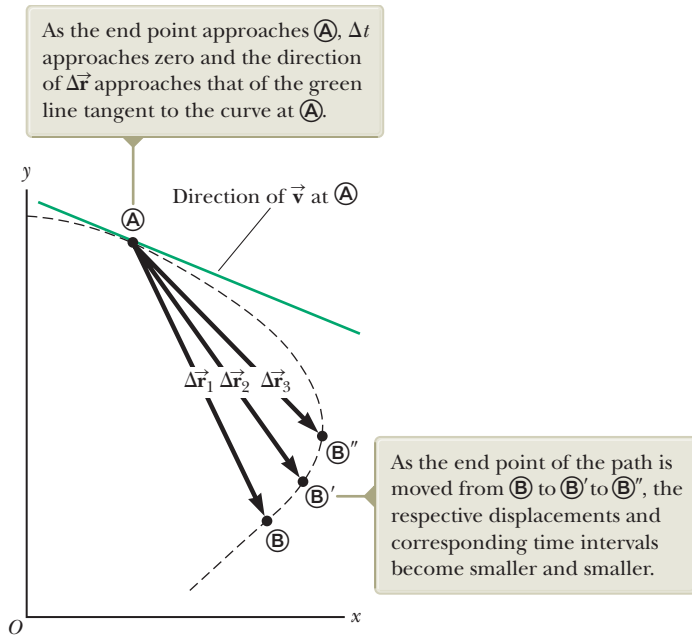


Figure 4.1 A particle moving in the xy plane is located with the position vector \vec{r} drawn from the origin to the particle. The displacement of the particle as it moves from Ⓐ to Ⓑ in the time interval $\Delta t = t_f - t_i$ is equal to the vector $\Delta\vec{r} = \vec{r}_f - \vec{r}_i$.

◀ Instantaneous velocity

Figure 4.2 As a particle moves between two points, its average velocity is in the direction of the displacement vector $\Delta\vec{r}$. By definition, the instantaneous velocity at \textcircled{A} is directed along the line tangent to the curve at \textcircled{A} .



As a particle moves from one point to another along some path, its instantaneous velocity vector changes from \vec{v}_i at time t_i to \vec{v}_f at time t_f . Knowing the velocity at these points allows us to determine the average acceleration of the particle. The **average acceleration** \vec{a}_{avg} of a particle is defined as the change in its instantaneous velocity vector $\Delta\vec{v}$ divided by the time interval Δt during which that change occurs:

Average acceleration ►

$$\vec{a}_{\text{avg}} \equiv \frac{\Delta\vec{v}}{\Delta t} = \frac{\vec{v}_f - \vec{v}_i}{t_f - t_i} \quad (4.4)$$

Because \vec{a}_{avg} is the ratio of a vector quantity $\Delta\vec{v}$ and a positive scalar quantity Δt , we conclude that average acceleration is a vector quantity directed along $\Delta\vec{v}$. As indicated in Figure 4.3, the direction of $\Delta\vec{v}$ is found by adding the vector $-\vec{v}_i$ (the negative of \vec{v}_i) to the vector \vec{v}_f because, by definition, $\Delta\vec{v} = \vec{v}_f - \vec{v}_i$. Compare Equation 4.4 with Equation 2.9.

When the average acceleration of a particle changes during different time intervals, it is useful to define its instantaneous acceleration. The **instantaneous acceleration** \vec{a} is defined as the limiting value of the ratio $\Delta\vec{v}/\Delta t$ as Δt approaches zero:

Instantaneous acceleration ►

$$\vec{a} \equiv \lim_{\Delta t \rightarrow 0} \frac{\Delta\vec{v}}{\Delta t} = \frac{d\vec{v}}{dt} \quad (4.5)$$

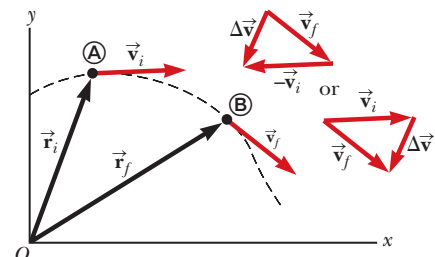
In other words, the instantaneous acceleration equals the derivative of the velocity vector with respect to time. Compare Equation 4.5 with Equation 2.10.

Various changes can occur when a particle accelerates. First, the magnitude of the velocity vector (the speed) may change with time as in straight-line (one-

Pitfall Prevention 4.1

Vector Addition Although the vector addition discussed in Chapter 3 involves *displacement* vectors, vector addition can be applied to *any* type of vector quantity. Figure 4.3, for example, shows the addition of *velocity* vectors using the graphical approach.

Figure 4.3 A particle moves from position \textcircled{A} to position \textcircled{B} . Its velocity vector changes from \vec{v}_i to \vec{v}_f . The vector diagrams at the upper right show two ways of determining the vector $\Delta\vec{v}$ from the initial and final velocities.



dimensional) motion. Second, the direction of the velocity vector may change with time even if its magnitude (speed) remains constant as in two-dimensional motion along a curved path. Finally, both the magnitude and the direction of the velocity vector may change simultaneously.

- Quick Quiz 4.1** Consider the following controls in an automobile in motion: gas pedal, brake, steering wheel. What are the controls in this list that cause an acceleration of the car? (a) all three controls (b) the gas pedal and the brake (c) only the brake (d) only the gas pedal (e) only the steering wheel

4.2 Two-Dimensional Motion with Constant Acceleration

In Section 2.5, we investigated one-dimensional motion of a particle under constant acceleration and developed the particle under constant acceleration model. Let us now consider two-dimensional motion during which the acceleration of a particle remains constant in both magnitude and direction. As we shall see, this approach is useful for analyzing some common types of motion.

Before embarking on this investigation, we need to emphasize an important point regarding two-dimensional motion. Imagine an air hockey puck moving in a straight line along a perfectly level, friction-free surface of an air hockey table. Figure 4.4a shows a motion diagram from an overhead point of view of this puck. Recall that in Section 2.4 we related the acceleration of an object to a force on the object. Because there are no forces on the puck in the horizontal plane, it moves with constant velocity in the x direction. Now suppose you blow a puff of air on the puck as it passes your position, with the force from your puff of air *exactly* in the y direction. Because the force from this puff of air has no component in the x direction, it causes no acceleration in the x direction. It only causes a momentary acceleration in the y direction, causing the puck to have a constant y component of velocity once the force from the puff of air is removed. After your puff of air on the puck, its velocity component in the x direction is unchanged as shown in Figure 4.4b. The generalization of this simple experiment is that **motion in two dimensions can be modeled as two independent motions in each of the two perpendicular directions associated with the x and y axes. That is, any influence in the y direction does not affect the motion in the x direction and vice versa.**

The position vector for a particle moving in the xy plane can be written

$$\vec{r} = x\hat{i} + y\hat{j} \quad (4.6)$$

where x , y , and \vec{r} change with time as the particle moves while the unit vectors \hat{i} and \hat{j} remain constant. If the position vector is known, the velocity of the particle can be obtained from Equations 4.3 and 4.6, which give

$$\vec{v} = \frac{d\vec{r}}{dt} = \frac{dx}{dt}\hat{i} + \frac{dy}{dt}\hat{j} = v_x\hat{i} + v_y\hat{j} \quad (4.7)$$

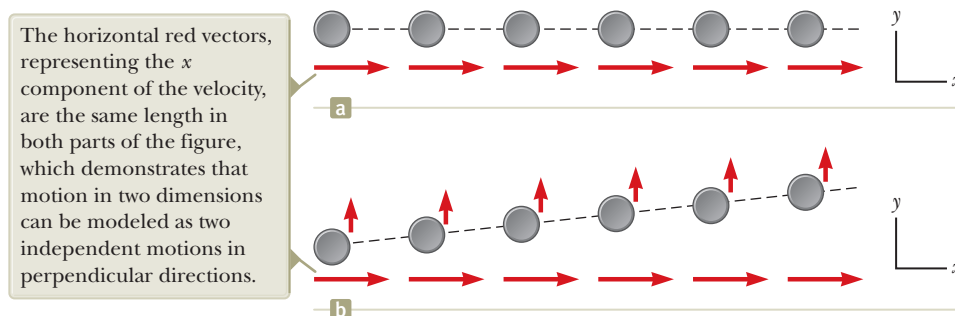


Figure 4.4 (a) A puck moves across a horizontal air hockey table at constant velocity in the x direction. (b) After a puff of air in the y direction is applied to the puck, the puck has gained a y component of velocity, but the x component is unaffected by the force in the perpendicular direction.

Because the acceleration \vec{a} of the particle is assumed constant in this discussion, its components a_x and a_y also are constants. Therefore, we can model the particle as a particle under constant acceleration independently in each of the two directions and apply the equations of kinematics separately to the x and y components of the velocity vector. Substituting, from Equation 2.13, $v_{xf} = v_{xi} + a_x t$ and $v_{yf} = v_{yi} + a_y t$ into Equation 4.7 to determine the final velocity at any time t , we obtain

$$\vec{v}_f = (v_{xi} + a_x t)\hat{i} + (v_{yi} + a_y t)\hat{j} = (v_{xi}\hat{i} + v_{yi}\hat{j}) + (a_x\hat{i} + a_y\hat{j})t$$

Velocity vector as a function of time for a particle under constant acceleration in two dimensions

$$\vec{v}_f = \vec{v}_i + \vec{a}t$$

(4.8)

This result states that the velocity of a particle at some time t equals the vector sum of its initial velocity \vec{v}_i at time $t = 0$ and the additional velocity $\vec{a}t$ acquired at time t as a result of constant acceleration. Equation 4.8 is the vector version of Equation 2.13.

Similarly, from Equation 2.16 we know that the x and y coordinates of a particle under constant acceleration are

$$x_f = x_i + v_{xi}t + \frac{1}{2}a_x t^2 \quad y_f = y_i + v_{yi}t + \frac{1}{2}a_y t^2$$

Substituting these expressions into Equation 4.6 (and labeling the final position vector \vec{r}_f) gives

$$\begin{aligned} \vec{r}_f &= (x_i + v_{xi}t + \frac{1}{2}a_x t^2)\hat{i} + (y_i + v_{yi}t + \frac{1}{2}a_y t^2)\hat{j} \\ &= (x_i\hat{i} + y_i\hat{j}) + (v_{xi}\hat{i} + v_{yi}\hat{j})t + \frac{1}{2}(a_x\hat{i} + a_y\hat{j})t^2 \end{aligned}$$

Position vector as a function of time for a particle under constant acceleration in two dimensions

$$\vec{r}_f = \vec{r}_i + \vec{v}_i t + \frac{1}{2}\vec{a}t^2$$

(4.9)

which is the vector version of Equation 2.16. Equation 4.9 tells us that the position vector \vec{r}_f of a particle is the vector sum of the original position \vec{r}_i , a displacement $\vec{v}_i t$ arising from the initial velocity of the particle, and a displacement $\frac{1}{2}\vec{a}t^2$ resulting from the constant acceleration of the particle.

We can consider Equations 4.8 and 4.9 to be the mathematical representation of a two-dimensional version of the particle under constant acceleration model. Graphical representations of Equations 4.8 and 4.9 are shown in Figure 4.5. The components of the position and velocity vectors are also illustrated in the figure. Notice from Figure 4.5a that \vec{v}_f is generally not along the direction of either \vec{v}_i or \vec{a} because the relationship between these quantities is a vector expression. For the same reason, from Figure 4.5b we see that \vec{r}_f is generally not along the direction of \vec{r}_i , \vec{v}_i , or \vec{a} . Finally, notice that \vec{v}_f and \vec{r}_f are generally not in the same direction.

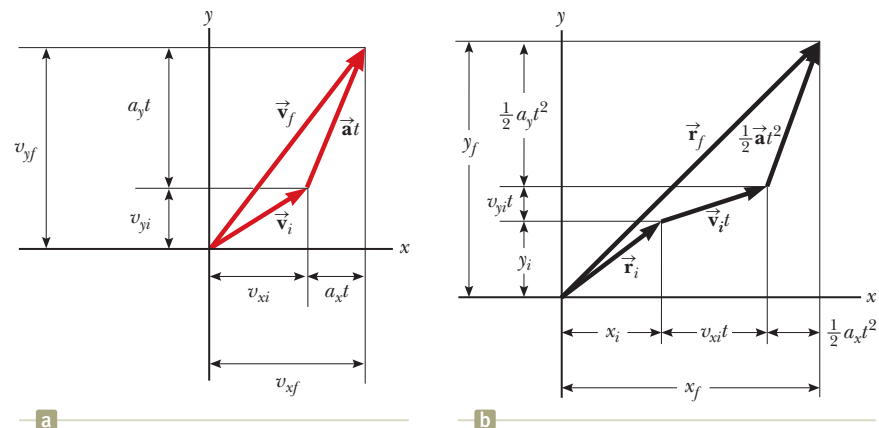


Figure 4.5 Vector representations and components of (a) the velocity and (b) the position of a particle under constant acceleration in two dimensions.

Example 4.1 Motion in a Plane **AM**

A particle moves in the xy plane, starting from the origin at $t = 0$ with an initial velocity having an x component of 20 m/s and a y component of -15 m/s. The particle experiences an acceleration in the x direction, given by $a_x = 4.0$ m/s².

(A) Determine the total velocity vector at any time.

SOLUTION

Conceptualize The components of the initial velocity tell us that the particle starts by moving toward the right and downward. The x component of velocity starts at 20 m/s and increases by 4.0 m/s every second. The y component of velocity never changes from its initial value of -15 m/s. We sketch a motion diagram of the situation in Figure 4.6. Because the particle is accelerating in the $+x$ direction, its velocity component in this direction increases and the path curves as shown in the diagram. Notice that the spacing between successive images increases as time goes on because the speed is increasing. The placement of the acceleration and velocity vectors in Figure 4.6 helps us further conceptualize the situation.

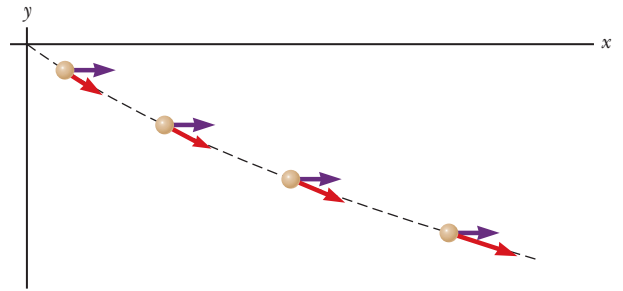


Figure 4.6 (Example 4.1) Motion diagram for the particle.

Categorize Because the initial velocity has components in both the x and y directions, we categorize this problem as one involving a particle moving in two dimensions. Because the particle only has an x component of acceleration, we model it as a *particle under constant acceleration* in the x direction and a *particle under constant velocity* in the y direction.

Analyze To begin the mathematical analysis, we set $v_{xi} = 20$ m/s, $v_{yi} = -15$ m/s, $a_x = 4.0$ m/s², and $a_y = 0$.

Use Equation 4.8 for the velocity vector:

$$\vec{v}_f = \vec{v}_i + \vec{a}t = (v_{xi} + a_x t)\hat{i} + (v_{yi} + a_y t)\hat{j}$$

Substitute numerical values with the velocity in meters per second and the time in seconds:

$$\vec{v}_f = [20 + (4.0)t]\hat{i} + [-15 + (0)t]\hat{j}$$

$$(1) \quad \vec{v}_f = [(20 + 4.0t)\hat{i} - 15\hat{j}]$$

Finalize Notice that the x component of velocity increases in time while the y component remains constant; this result is consistent with our prediction.

(B) Calculate the velocity and speed of the particle at $t = 5.0$ s and the angle the velocity vector makes with the x axis.

SOLUTION**Analyze**

Evaluate the result from Equation (1) at $t = 5.0$ s:

$$\vec{v}_f = [(20 + 4.0(5.0))\hat{i} - 15\hat{j}] = (40\hat{i} - 15\hat{j}) \text{ m/s}$$

Determine the angle θ that \vec{v}_f makes with the x axis at $t = 5.0$ s:

$$\theta = \tan^{-1}\left(\frac{v_{yf}}{v_{xf}}\right) = \tan^{-1}\left(\frac{-15 \text{ m/s}}{40 \text{ m/s}}\right) = -21^\circ$$

Evaluate the speed of the particle as the magnitude of \vec{v}_f :

$$v_f = |\vec{v}_f| = \sqrt{v_{xf}^2 + v_{yf}^2} = \sqrt{(40)^2 + (-15)^2} \text{ m/s} = 43 \text{ m/s}$$

Finalize The negative sign for the angle θ indicates that the velocity vector is directed at an angle of 21° below the positive x axis. Notice that if we calculate v_f from the x and y components of \vec{v}_f , we find that $v_f > v_i$. Is that consistent with our prediction?

(C) Determine the x and y coordinates of the particle at any time t and its position vector at this time.

continued

4.1 continued

SOLUTION

Analyze

Use the components of Equation 4.9 with $x_i = y_i = 0$ at $t = 0$ and with x and y in meters and t in seconds:

$$x_f = v_{x_i}t + \frac{1}{2}a_x t^2 = 20t + 2.0t^2$$

$$y_f = v_{y_i}t = -15t$$

Express the position vector of the particle at any time t :

$$\vec{r}_f = x_f \hat{i} + y_f \hat{j} = (20t + 2.0t^2) \hat{i} - 15t \hat{j}$$

Finalize Let us now consider a limiting case for very large values of t .

WHAT IF? What if we wait a very long time and then observe the motion of the particle? How would we describe the motion of the particle for large values of the time?

Answer Looking at Figure 4.6, we see the path of the particle curving toward the x axis. There is no reason to assume this tendency will change, which suggests that the path will become more and more parallel to the x axis as time grows large. Mathematically, Equation (1) shows that the y component of the velocity remains constant while the x component grows linearly with t . Therefore, when t is very large, the x component of the velocity will be much larger than the y component, suggesting that the velocity vector becomes more and more parallel to the x axis. The magnitudes of both x_f and y_f continue to grow with time, although x_f grows much faster.

Pitfall Prevention 4.2

Acceleration at the Highest Point

As discussed in Pitfall Prevention 2.8, many people claim that the acceleration of a projectile at the topmost point of its trajectory is zero. This mistake arises from confusion between zero vertical velocity and zero acceleration. If the projectile were to experience zero acceleration at the highest point, its velocity at that point would not change; rather, the projectile would move horizontally at constant speed from then on! That does not happen, however, because the acceleration is *not* zero anywhere along the trajectory.



Lester Lefkowitz/ixi/Getty Images

A welder cuts holes through a heavy metal construction beam with a hot torch. The sparks generated in the process follow parabolic paths.

4.3 Projectile Motion

Anyone who has observed a baseball in motion has observed projectile motion. The ball moves in a curved path and returns to the ground. **Projectile motion** of an object is simple to analyze if we make two assumptions: (1) the free-fall acceleration is constant over the range of motion and is directed downward,¹ and (2) the effect of air resistance is negligible.² With these assumptions, we find that the path of a projectile, which we call its *trajectory*, is *always* a parabola as shown in Figure 4.7.

We use these assumptions throughout this chapter.

The expression for the position vector of the projectile as a function of time follows directly from Equation 4.9, with its acceleration being that due to gravity, $\vec{a} = \vec{g}$:

$$\vec{r}_f = \vec{r}_i + \vec{v}_i t + \frac{1}{2} \vec{g} t^2 \quad (4.10)$$

where the initial x and y components of the velocity of the projectile are

$$v_{x_i} = v_i \cos \theta_i \quad v_{y_i} = v_i \sin \theta_i \quad (4.11)$$

The expression in Equation 4.10 is plotted in Figure 4.8 for a projectile launched from the origin, so that $\vec{r}_i = 0$. The final position of a particle can be considered to be the superposition of its initial position \vec{r}_i ; the term $\vec{v}_i t$, which is its displacement if no acceleration were present; and the term $\frac{1}{2} \vec{g} t^2$ that arises from its acceleration due to gravity. In other words, if there were no gravitational acceleration, the particle would continue to move along a straight path in the direction of \vec{v}_i . Therefore, the vertical distance $\frac{1}{2} \vec{g} t^2$ through which the particle “falls” off the straight-line path is the same distance that an object dropped from rest would fall during the same time interval.

¹This assumption is reasonable as long as the range of motion is small compared with the radius of the Earth (6.4×10^6 m). In effect, this assumption is equivalent to assuming the Earth is flat over the range of motion considered.

²This assumption is often *not* justified, especially at high velocities. In addition, any spin imparted to a projectile, such as that applied when a pitcher throws a curve ball, can give rise to some very interesting effects associated with aerodynamic forces, which will be discussed in Chapter 14.

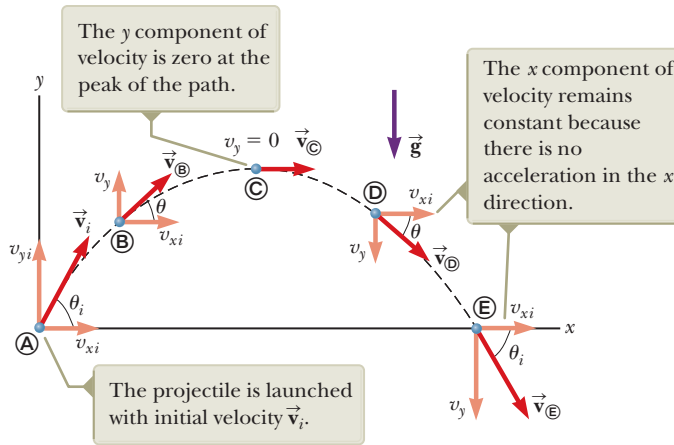


Figure 4.7 The parabolic path of a projectile that leaves the origin with a velocity \vec{v}_i . The velocity vector \vec{v} changes with time in both magnitude and direction. This change is the result of acceleration $\vec{a} = \vec{g}$ in the negative y direction.

In Section 4.2, we stated that two-dimensional motion with constant acceleration can be analyzed as a combination of two independent motions in the x and y directions, with accelerations a_x and a_y . Projectile motion can also be handled in this way, with acceleration $a_x = 0$ in the x direction and a constant acceleration $a_y = -g$ in the y direction. Therefore, when solving projectile motion problems, use two analysis models: (1) the particle under constant velocity in the horizontal direction (Eq. 2.7):

$$x_f = x_i + v_{xi}t$$

and (2) the particle under constant acceleration in the vertical direction (Eqs. 2.13–2.17 with x changed to y and $a_y = -g$):

$$v_{yf} = v_{yi} - gt$$

$$v_{y,\text{avg}} = \frac{v_{yi} + v_{yf}}{2}$$

$$y_f = y_i + \frac{1}{2}(v_{yi} + v_{yf})t$$

$$y_f = y_i + v_{yi}t - \frac{1}{2}gt^2$$

$$v_{yf}^2 = v_{yi}^2 - 2g(y_f - y_i)$$

The horizontal and vertical components of a projectile's motion are completely independent of each other and can be handled separately, with time t as the common variable for both components.

- Quick Quiz 4.2** (i) As a projectile thrown upward moves in its parabolic path (such as in Fig. 4.8), at what point along its path are the velocity and acceleration vectors for the projectile perpendicular to each other? (a) nowhere (b) the highest point (c) the launch point (ii) From the same choices, at what point are the velocity and acceleration vectors for the projectile parallel to each other?

Horizontal Range and Maximum Height of a Projectile

Before embarking on some examples, let us consider a special case of projectile motion that occurs often. Assume a projectile is launched from the origin at $t_i = 0$ with a positive v_{yi} component as shown in Figure 4.9 and returns to the same horizontal level. This situation is common in sports, where baseballs, footballs, and golf balls often land at the same level from which they were launched.

Two points in this motion are especially interesting to analyze: the peak point **A**, which has Cartesian coordinates $(R/2, h)$, and the point **B**, which has coordinates $(R, 0)$. The distance R is called the *horizontal range* of the projectile, and the distance h is its *maximum height*. Let us find h and R mathematically in terms of v_i , θ_i , and g .

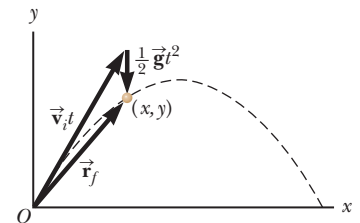


Figure 4.8 The position vector \vec{r}_f of a projectile launched from the origin whose initial velocity at the origin is \vec{v}_i . The vector $\vec{v}_i t$ would be the displacement of the projectile if gravity were absent, and the vector $\frac{1}{2}\vec{g}t^2$ is its vertical displacement from a straight-line path due to its downward gravitational acceleration.

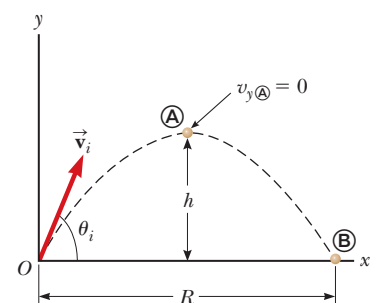


Figure 4.9 A projectile launched over a flat surface from the origin at $t_i = 0$ with an initial velocity \vec{v}_i . The maximum height of the projectile is h , and the horizontal range is R . At **A**, the peak of the trajectory, the particle has coordinates $(R/2, h)$.

We can determine h by noting that at the peak $v_{y\text{ⓐ}} = 0$. Therefore, from the particle under constant acceleration model, we can use the y direction version of Equation 2.13 to determine the time $t_{\text{ⓐ}}$ at which the projectile reaches the peak:

$$v_{yf} = v_{yi} - gt \rightarrow 0 = v_i \sin \theta_i - gt_{\text{ⓐ}}$$

$$t_{\text{ⓐ}} = \frac{v_i \sin \theta_i}{g}$$

Substituting this expression for $t_{\text{ⓐ}}$ into the y direction version of Equation 2.16 and replacing $y_f = y_{\text{ⓐ}}$ with h , we obtain an expression for h in terms of the magnitude and direction of the initial velocity vector:

$$y_f = y_i + v_{yi}t - \frac{1}{2}gt^2 \rightarrow h = (v_i \sin \theta_i) \frac{v_i \sin \theta_i}{g} - \frac{1}{2}g \left(\frac{v_i \sin \theta_i}{g} \right)^2$$

$$h = \frac{v_i^2 \sin^2 \theta_i}{2g} \quad (4.12)$$

The range R is the horizontal position of the projectile at a time that is twice the time at which it reaches its peak, that is, at time $t_{\text{ⓑ}} = 2t_{\text{ⓐ}}$. Using the particle under constant velocity model, noting that $v_{xi} = v_{x\text{ⓑ}} = v_i \cos \theta_i$, and setting $x_{\text{ⓑ}} = R$ at $t = 2t_{\text{ⓐ}}$, we find that

$$x_f = x_i + v_{xi}t \rightarrow R = v_{xi}t_{\text{ⓑ}} = (v_i \cos \theta_i)2t_{\text{ⓐ}}$$

$$= (v_i \cos \theta_i) \frac{2v_i \sin \theta_i}{g} = \frac{2v_i^2 \sin \theta_i \cos \theta_i}{g}$$

Using the identity $\sin 2\theta = 2 \sin \theta \cos \theta$ (see Appendix B.4), we can write R in the more compact form

$$R = \frac{v_i^2 \sin 2\theta_i}{g} \quad (4.13)$$

The maximum value of R from Equation 4.13 is $R_{\text{max}} = v_i^2/g$. This result makes sense because the maximum value of $\sin 2\theta_i$ is 1, which occurs when $2\theta_i = 90^\circ$. Therefore, R is a maximum when $\theta_i = 45^\circ$.

Figure 4.10 illustrates various trajectories for a projectile having a given initial speed but launched at different angles. As you can see, the range is a maximum for $\theta_i = 45^\circ$. In addition, for any θ_i other than 45° , a point having Cartesian coordinates $(R, 0)$ can be reached by using either one of two complementary values of θ_i , such as 75° and 15° . Of course, the maximum height and time of flight for one of these values of θ_i are different from the maximum height and time of flight for the complementary value.

Quick Quiz 4.3 Rank the launch angles for the five paths in Figure 4.10 with respect to time of flight from the shortest time of flight to the longest.

Pitfall Prevention 4.3

The Range Equation Equation 4.13 is useful for calculating R only for a symmetric path as shown in Figure 4.10. If the path is not symmetric, *do not use this equation*. The particle under constant velocity and particle under constant acceleration models are the important starting points because they give the position and velocity components of *any* projectile moving with constant acceleration in two dimensions at *any* time t .

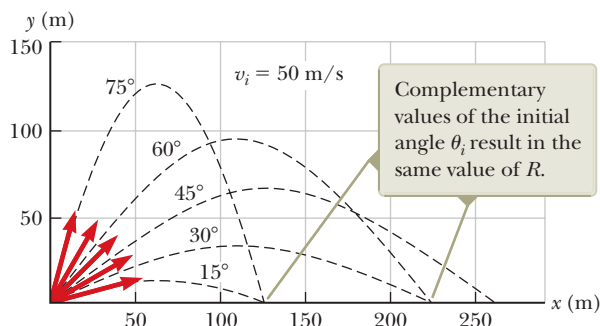


Figure 4.10 A projectile launched over a flat surface from the origin with an initial speed of 50 m/s at various angles of projection.

Problem-Solving Strategy Projectile Motion

We suggest you use the following approach when solving projectile motion problems.

- 1. Conceptualize.** Think about what is going on physically in the problem. Establish the mental representation by imagining the projectile moving along its trajectory.
- 2. Categorize.** Confirm that the problem involves a particle in free fall and that air resistance is neglected. Select a coordinate system with x in the horizontal direction and y in the vertical direction. Use the particle under constant velocity model for the x component of the motion. Use the particle under constant acceleration model for the y direction. In the special case of the projectile returning to the same level from which it was launched, use Equations 4.12 and 4.13.
- 3. Analyze.** If the initial velocity vector is given, resolve it into x and y components. Select the appropriate equation(s) from the particle under constant acceleration model for the vertical motion and use these along with Equation 2.7 for the horizontal motion to solve for the unknown(s).
- 4. Finalize.** Once you have determined your result, check to see if your answers are consistent with the mental and pictorial representations and your results are realistic.

Example 4.2 The Long Jump

A long jumper (Fig. 4.11) leaves the ground at an angle of 20.0° above the horizontal and at a speed of 11.0 m/s .

(A) How far does he jump in the horizontal direction?

SOLUTION

Conceptualize The arms and legs of a long jumper move in a complicated way, but we will ignore this motion. We conceptualize the motion of the long jumper as equivalent to that of a simple projectile.

Categorize We categorize this example as a projectile motion problem. Because the initial speed and launch angle are given and because the final height is the same as the initial height, we further categorize this problem as satisfying the conditions for which Equations 4.12 and 4.13 can be used. This approach is the most direct way to analyze this problem, although the general methods that have been described will always give the correct answer.

Analyze

Use Equation 4.13 to find the range of the jumper:

$$R = \frac{v_i^2 \sin 2\theta_i}{g} = \frac{(11.0 \text{ m/s})^2 \sin 2(20.0^\circ)}{9.80 \text{ m/s}^2} = 7.94 \text{ m}$$

(B) What is the maximum height reached?


SOLUTION

Analyze

Find the maximum height reached by using Equation 4.12:

$$h = \frac{v_i^2 \sin^2 \theta_i}{2g} = \frac{(11.0 \text{ m/s})^2 (\sin 20.0^\circ)^2}{2(9.80 \text{ m/s}^2)} = 0.722 \text{ m}$$

Finalize Find the answers to parts (A) and (B) using the general method. The results should agree. Treating the long jumper as a particle is an oversimplification. Nevertheless, the values obtained are consistent with experience in sports. We can model a complicated system such as a long jumper as a particle and still obtain reasonable results.



Sipa via AP Images

Figure 4.11 (Example 4.2) Romain Barras of France competes in the men's decathlon long jump at the 2008 Beijing Olympic Games.

Example 4.3 A Bull's-Eye Every Time AM

In a popular lecture demonstration, a projectile is fired at a target in such a way that the projectile leaves the gun at the same time the target is dropped from rest. Show that if the gun is initially aimed at the stationary target, the projectile hits the falling target as shown in Figure 4.12a.

SOLUTION

Conceptualize We conceptualize the problem by studying Figure 4.12a. Notice that the problem does not ask for numerical values. The expected result must involve an algebraic argument.

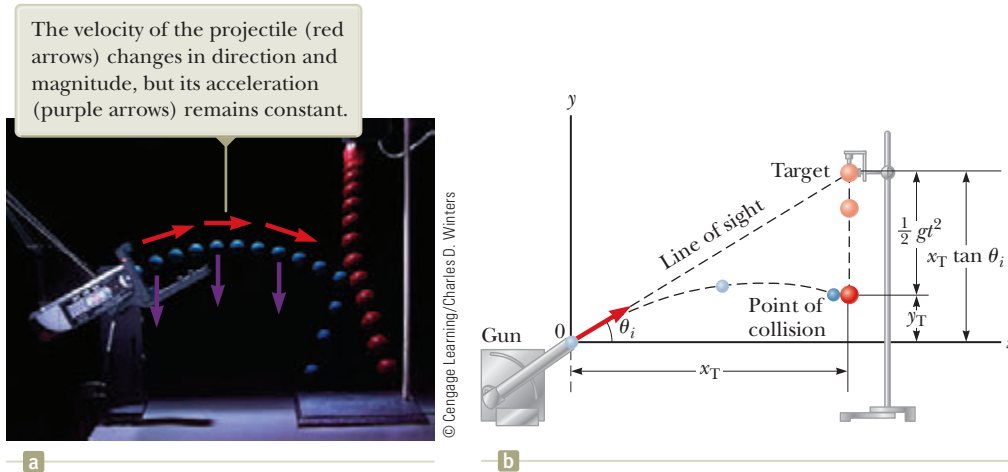


Figure 4.12 (Example 4.3) (a) Multiflash photograph of the projectile–target demonstration. If the gun is aimed directly at the target and is fired at the same instant the target begins to fall, the projectile will hit the target. (b) Schematic diagram of the projectile–target demonstration.

Categorize Because both objects are subject only to gravity, we categorize this problem as one involving two objects in free fall, the target moving in one dimension and the projectile moving in two. The target T is modeled as a *particle under constant acceleration* in one dimension. The projectile P is modeled as a *particle under constant acceleration* in the y direction and a *particle under constant velocity* in the x direction.

Analyze Figure 4.12b shows that the initial y coordinate y_{iT} of the target is $x_T \tan \theta_i$ and its initial velocity is zero. It falls with acceleration $a_y = -g$.

Write an expression for the y coordinate of the target at any moment after release, noting that its initial velocity is zero:

$$(1) \quad y_T = y_{iT} + (0)t - \frac{1}{2}gt^2 = x_T \tan \theta_i - \frac{1}{2}gt^2$$

Write an expression for the y coordinate of the projectile at any moment:

$$(2) \quad y_P = y_{iP} + v_{y_iP}t - \frac{1}{2}gt^2 = 0 + (v_{iP} \sin \theta_i)t - \frac{1}{2}gt^2 = (v_{iP} \sin \theta_i)t - \frac{1}{2}gt^2$$

Write an expression for the x coordinate of the projectile at any moment:

$$x_P = x_{iP} + v_{x_iP}t = 0 + (v_{iP} \cos \theta_i)t = (v_{iP} \cos \theta_i)t$$

Solve this expression for time as a function of the horizontal position of the projectile:

$$t = \frac{x_P}{v_{iP} \cos \theta_i}$$

Substitute this expression into Equation (2):

$$(3) \quad y_P = (v_{iP} \sin \theta_i) \left(\frac{x_P}{v_{iP} \cos \theta_i} \right) - \frac{1}{2}gt^2 = x_P \tan \theta_i - \frac{1}{2}gt^2$$

Finalize Compare Equations (1) and (3). We see that when the x coordinates of the projectile and target are the same—that is, when $x_T = x_P$ —their y coordinates given by Equations (1) and (3) are the same and a collision results.

Example 4.4 That's Quite an Arm! **AM**

A stone is thrown from the top of a building upward at an angle of 30.0° to the horizontal with an initial speed of 20.0 m/s as shown in Figure 4.13. The height from which the stone is thrown is 45.0 m above the ground.

(A) How long does it take the stone to reach the ground?

SOLUTION

Conceptualize Study Figure 4.13, in which we have indicated the trajectory and various parameters of the motion of the stone.

Categorize We categorize this problem as a projectile motion problem. The stone is modeled as a *particle under constant acceleration* in the y direction and a *particle under constant velocity* in the x direction.

Analyze We have the information $x_i = y_i = 0$, $y_f = -45.0\text{ m}$, $a_y = -g$, and $v_i = 20.0\text{ m/s}$ (the numerical value of y_f is negative because we have chosen the point of the throw as the origin).

Find the initial x and y components of the stone's velocity:

Express the vertical position of the stone from the particle under constant acceleration model:

Substitute numerical values:

Solve the quadratic equation for t :

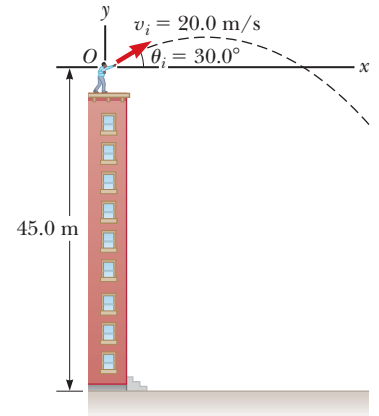


Figure 4.13
(Example 4.4) A stone is thrown from the top of a building.

$$v_{xi} = v_i \cos \theta_i = (20.0\text{ m/s}) \cos 30.0^\circ = 17.3\text{ m/s}$$

$$v_{yi} = v_i \sin \theta_i = (20.0\text{ m/s}) \sin 30.0^\circ = 10.0\text{ m/s}$$

$$y_f = y_i + v_{yi}t - \frac{1}{2}gt^2$$

$$-45.0\text{ m} = 0 + (10.0\text{ m/s})t + \frac{1}{2}(-9.80\text{ m/s}^2)t^2$$

$$t = 4.22\text{ s}$$

(B) What is the speed of the stone just before it strikes the ground?

SOLUTION

Analyze Use the velocity equation in the particle under constant acceleration model to obtain the y component of the velocity of the stone just before it strikes the ground:

Substitute numerical values, using $t = 4.22\text{ s}$:

Use this component with the horizontal component $v_{xf} = v_{xi} = 17.3\text{ m/s}$ to find the speed of the stone at $t = 4.22\text{ s}$:

$$v_{yf} = v_{yi} - gt$$

$$v_{yf} = 10.0\text{ m/s} + (-9.80\text{ m/s}^2)(4.22\text{ s}) = -31.3\text{ m/s}$$

$$v_f = \sqrt{v_{xf}^2 + v_{yf}^2} = \sqrt{(17.3\text{ m/s})^2 + (-31.3\text{ m/s})^2} = 35.8\text{ m/s}$$

Finalize Is it reasonable that the y component of the final velocity is negative? Is it reasonable that the final speed is larger than the initial speed of 20.0 m/s ?

WHAT IF? What if a horizontal wind is blowing in the same direction as the stone is thrown and it causes the stone to have a horizontal acceleration component $a_x = 0.500\text{ m/s}^2$? Which part of this example, (A) or (B), will have a different answer?

Answer Recall that the motions in the x and y directions are independent. Therefore, the horizontal wind cannot affect the vertical motion. The vertical motion determines the time of the projectile in the air, so the answer to part (A) does not change. The wind causes the horizontal velocity component to increase with time, so the final speed will be larger in part (B). Taking $a_x = 0.500\text{ m/s}^2$, we find $v_{xf} = 19.4\text{ m/s}$ and $v_f = 36.9\text{ m/s}$.

Example 4.5 The End of the Ski Jump AM

A ski jumper leaves the ski track moving in the horizontal direction with a speed of 25.0 m/s as shown in Figure 4.14. The landing incline below her falls off with a slope of 35.0° . Where does she land on the incline?

SOLUTION

Conceptualize We can conceptualize this problem based on memories of observing winter Olympic ski competitions. We estimate the skier to be airborne for perhaps 4 s and to travel a distance of about 100 m horizontally. We should expect the value of d , the distance traveled along the incline, to be of the same order of magnitude.

Categorize We categorize the problem as one of a particle in projectile motion. As with other projectile motion problems, we use the *particle under constant velocity* model for the horizontal motion and the *particle under constant acceleration* model for the vertical motion.

Analyze It is convenient to select the beginning of the jump as the origin. The initial velocity components are $v_{xi} = 25.0$ m/s and $v_{yi} = 0$. From the right triangle in Figure 4.14, we see that the jumper's x and y coordinates at the landing point are given by $x_f = d \cos \phi$ and $y_f = -d \sin \phi$.

Express the coordinates of the jumper as a function of time, using the particle under constant velocity model for x and the position equation from the particle under constant acceleration model for y :

$$\begin{aligned} (1) \quad x_f &= v_{xi} t \\ (2) \quad y_f &= v_{yi} t - \frac{1}{2} g t^2 \\ (3) \quad d \cos \phi &= v_{xi} t \\ (4) \quad -d \sin \phi &= -\frac{1}{2} g t^2 \end{aligned}$$

Solve Equation (3) for t and substitute the result into Equation (4):

$$-d \sin \phi = -\frac{1}{2} g \left(\frac{d \cos \phi}{v_{xi}} \right)^2$$

Solve for d and substitute numerical values:

$$d = \frac{2v_{xi}^2 \sin \phi}{g \cos^2 \phi} = \frac{2(25.0 \text{ m/s})^2 \sin 35.0^\circ}{(9.80 \text{ m/s}^2) \cos^2 35.0^\circ} = 109 \text{ m}$$

Evaluate the x and y coordinates of the point at which the skier lands:

$$\begin{aligned} x_f &= d \cos \phi = (109 \text{ m}) \cos 35.0^\circ = 89.3 \text{ m} \\ y_f &= -d \sin \phi = -(109 \text{ m}) \sin 35.0^\circ = -62.5 \text{ m} \end{aligned}$$

Finalize Let us compare these results with our expectations. We expected the horizontal distance to be on the order of 100 m, and our result of 89.3 m is indeed on this order of magnitude. It might be useful to calculate the time interval that the jumper is in the air and compare it with our estimate of about 4 s.

WHAT IF? Suppose everything in this example is the same except the ski jump is curved so that the jumper is projected upward at an angle from the end of the track. Is this design better in terms of maximizing the length of the jump?

Answer If the initial velocity has an upward component, the skier will be in the air longer and should therefore travel farther. Tilting the initial velocity vector upward, however, will reduce the horizontal component of the initial velocity. Therefore, angling the end of the ski track upward at a *large* angle may actually *reduce* the distance. Consider the extreme case: the skier is projected at 90° to the horizontal and simply goes up and comes back down at the end of the ski track! This argument suggests that there must be an optimal angle between 0° and 90° that represents a balance between making the flight time longer and the horizontal velocity component smaller.

Let us find this optimal angle mathematically. We modify Equations (1) through (4) in the following way, assuming the skier is projected at an angle θ with respect to the horizontal over a landing incline sloped with an arbitrary angle ϕ :

$$\begin{aligned} (1) \text{ and } (3) &\rightarrow x_f = (v_i \cos \theta) t = d \cos \phi \\ (2) \text{ and } (4) &\rightarrow y_f = (v_i \sin \theta) t - \frac{1}{2} g t^2 = -d \sin \phi \end{aligned}$$

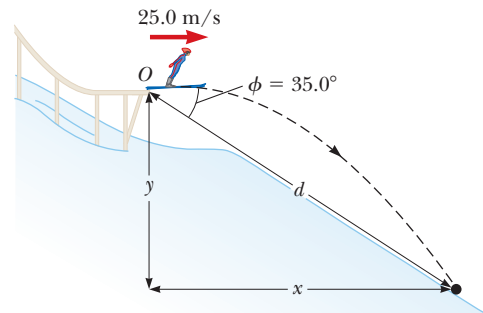


Figure 4.14 (Example 4.5) A ski jumper leaves the track moving in a horizontal direction.

4.5 continued

By eliminating the time t between these equations and using differentiation to maximize d in terms of θ , we arrive (after several steps; see Problem 88) at the following equation for the angle θ that gives the maximum value of d :

$$\theta = 45^\circ - \frac{\phi}{2}$$

For the slope angle in Figure 4.14, $\phi = 35.0^\circ$; this equation results in an optimal launch angle of $\theta = 27.5^\circ$. For a slope angle of $\phi = 0^\circ$, which represents a horizontal plane, this equation gives an optimal launch angle of $\theta = 45^\circ$, as we would expect (see Figure 4.10).

4.4 Analysis Model: Particle in Uniform Circular Motion

Figure 4.15a shows a car moving in a circular path; we describe this motion by calling it **circular motion**. If the car is moving on this path with *constant speed* v , we call it **uniform circular motion**. Because it occurs so often, this type of motion is recognized as an analysis model called the **particle in uniform circular motion**. We discuss this model in this section.

It is often surprising to students to find that even though an object moves at a constant speed in a circular path, *it still has an acceleration*. To see why, consider the defining equation for acceleration, $\vec{a} = d\vec{v}/dt$ (Eq. 4.5). Notice that the acceleration depends on the change in the *velocity*. Because velocity is a vector quantity, an acceleration can occur in two ways as mentioned in Section 4.1: by a change in the *magnitude* of the velocity and by a change in the *direction* of the velocity. The latter situation occurs for an object moving with constant speed in a circular path. The constant-magnitude velocity vector is always tangent to the path of the object and perpendicular to the radius of the circular path. Therefore, the direction of the velocity vector is always changing.

Let us first argue that the acceleration vector in uniform circular motion is always perpendicular to the path and always points toward the center of the circle. If that were not true, there would be a component of the acceleration parallel to the path and therefore parallel to the velocity vector. Such an acceleration component would lead to a change in the speed of the particle along the path. This situation, however, is inconsistent with our setup of the situation: the particle moves with constant speed along the path. Therefore, for *uniform* circular motion, the acceleration vector can only have a component perpendicular to the path, which is toward the center of the circle.

Let us now find the magnitude of the acceleration of the particle. Consider the diagram of the position and velocity vectors in Figure 4.15b. The figure also shows the vector representing the change in position $\Delta\vec{r}$ for an arbitrary time interval. The particle follows a circular path of radius r , part of which is shown by the dashed

Pitfall Prevention 4.4

Acceleration of a Particle in Uniform Circular Motion

Remember that acceleration in physics is defined as a change in the *velocity*, not a change in the *speed* (contrary to the everyday interpretation). In circular motion, the velocity vector is always changing in direction, so there is indeed an acceleration.

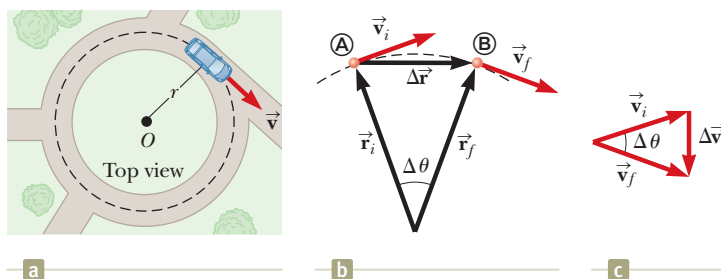


Figure 4.15 (a) A car moving along a circular path at constant speed experiences uniform circular motion. (b) As a particle moves along a portion of a circular path from Ⓐ to Ⓑ, its velocity vector changes from \vec{v}_i to \vec{v}_f . (c) The construction for determining the direction of the change in velocity $\Delta\vec{v}$, which is toward the center of the circle for small $\Delta\vec{r}$.

curve. The particle is at \textcircled{A} at time t_i , and its velocity at that time is \vec{v}_i ; it is at \textcircled{B} at some later time t_f , and its velocity at that time is \vec{v}_f . Let us also assume \vec{v}_i and \vec{v}_f differ only in direction; their magnitudes are the same (that is, $v_i = v_f = v$ because it is *uniform* circular motion).

In Figure 4.15c, the velocity vectors in Figure 4.15b have been redrawn tail to tail. The vector $\Delta\vec{v}$ connects the tips of the vectors, representing the vector addition $\vec{v}_f = \vec{v}_i + \Delta\vec{v}$. In both Figures 4.15b and 4.15c, we can identify triangles that help us analyze the motion. The angle $\Delta\theta$ between the two position vectors in Figure 4.15b is the same as the angle between the velocity vectors in Figure 4.15c because the velocity vector \vec{v} is always perpendicular to the position vector \vec{r} . Therefore, the two triangles are *similar*. (Two triangles are similar if the angle between any two sides is the same for both triangles and if the ratio of the lengths of these sides is the same.) We can now write a relationship between the lengths of the sides for the two triangles in Figures 4.15b and 4.15c:

$$\frac{|\Delta\vec{v}|}{v} = \frac{|\Delta\vec{r}|}{r}$$

where $v = v_i = v_f$ and $r = r_i = r_f$. This equation can be solved for $|\Delta\vec{v}|$, and the expression obtained can be substituted into Equation 4.4, $\vec{a}_{\text{avg}} = \Delta\vec{v}/\Delta t$, to give the magnitude of the average acceleration over the time interval for the particle to move from \textcircled{A} to \textcircled{B} :

$$|\vec{a}_{\text{avg}}| = \frac{|\Delta\vec{v}|}{|\Delta t|} = \frac{v|\Delta\vec{r}|}{r\Delta t}$$

Now imagine that points \textcircled{A} and \textcircled{B} in Figure 4.15b become extremely close together. As \textcircled{A} and \textcircled{B} approach each other, Δt approaches zero, $|\Delta\vec{r}|$ approaches the distance traveled by the particle along the circular path, and the ratio $|\Delta\vec{r}|/\Delta t$ approaches the speed v . In addition, the average acceleration becomes the instantaneous acceleration at point \textcircled{A} . Hence, in the limit $\Delta t \rightarrow 0$, the magnitude of the acceleration is

Centripetal acceleration
for a particle in uniform
circular motion

$$a_c = \frac{v^2}{r} \quad (4.14)$$

An acceleration of this nature is called a **centripetal acceleration** (*centripetal* means *center-seeking*). The subscript on the acceleration symbol reminds us that the acceleration is centripetal.

In many situations, it is convenient to describe the motion of a particle moving with constant speed in a circle of radius r in terms of the **period** T , which is defined as the time interval required for one complete revolution of the particle. In the time interval T , the particle moves a distance of $2\pi r$, which is equal to the circumference of the particle's circular path. Therefore, because its speed is equal to the circumference of the circular path divided by the period, or $v = 2\pi r/T$, it follows that

Period of circular motion
for a particle in uniform
circular motion

$$T = \frac{2\pi r}{v} \quad (4.15)$$

The period of a particle in uniform circular motion is a measure of the number of seconds for one revolution of the particle around the circle. The inverse of the period is the *rotation rate* and is measured in revolutions per second. Because one full revolution of the particle around the circle corresponds to an angle of 2π radians, the product of 2π and the rotation rate gives the **angular speed** ω of the particle, measured in radians/s or s^{-1} :

$$\omega = \frac{2\pi}{T} \quad (4.16)$$

Combining this equation with Equation 4.15, we find a relationship between angular speed and the translational speed with which the particle travels in the circular path:

$$\omega = 2\pi \left(\frac{v}{2\pi r} \right) = \frac{v}{r} \rightarrow v = r\omega \quad (4.17)$$

Equation 4.17 demonstrates that, for a fixed angular speed, the translational speed becomes larger as the radial position becomes larger. Therefore, for example, if a merry-go-round rotates at a fixed angular speed ω , a rider at an outer position at large r will be traveling through space faster than a rider at an inner position at smaller r . We will investigate Equations 4.16 and 4.17 more deeply in Chapter 10.

We can express the centripetal acceleration of a particle in uniform circular motion in terms of angular speed by combining Equations 4.14 and 4.17:

$$\begin{aligned} a_c &= \frac{(r\omega)^2}{r} \\ a_c &= r\omega^2 \end{aligned} \quad (4.18)$$

Equations 4.14–4.18 are to be used when the particle in uniform circular motion model is identified as appropriate for a given situation.

- Quick Quiz 4.4** A particle moves in a circular path of radius r with speed v . It then increases its speed to $2v$ while traveling along the same circular path. (i) The centripetal acceleration of the particle has changed by what factor? Choose one: (a) 0.25 (b) 0.5 (c) 2 (d) 4 (e) impossible to determine (ii) From the same choices, by what factor has the period of the particle changed?

Pitfall Prevention 4.5

Centripetal Acceleration Is Not Constant

We derived the magnitude of the centripetal acceleration vector and found it to be constant for uniform circular motion, but *the centripetal acceleration vector is not constant*. It always points toward the center of the circle, but it continuously changes direction as the object moves around the circular path.

Analysis Model Particle in Uniform Circular Motion

Imagine a moving object that can be modeled as a particle. If it moves in a circular path of radius r at a constant speed v , the magnitude of its centripetal acceleration is

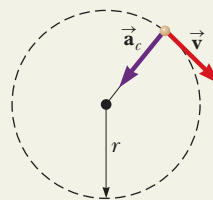
$$a_c = \frac{v^2}{r} \quad (4.14)$$

and the **period** of the particle's motion is given by

$$T = \frac{2\pi r}{v} \quad (4.15)$$

The **angular speed** of the particle is

$$\omega = \frac{2\pi}{T} \quad (4.16)$$



Examples:

- a rock twirled in a circle on a string of constant length
- a planet traveling around a perfectly circular orbit (Chapter 13)
- a charged particle moving in a uniform magnetic field (Chapter 29)
- an electron in orbit around a nucleus in the Bohr model of the hydrogen atom (Chapter 42)

Example 4.6 The Centripetal Acceleration of the Earth AM

(A) What is the centripetal acceleration of the Earth as it moves in its orbit around the Sun?

SOLUTION

Conceptualize Think about a mental image of the Earth in a circular orbit around the Sun. We will model the Earth as a particle and approximate the Earth's orbit as circular (it's actually slightly elliptical, as we discuss in Chapter 13).

Categorize The Conceptualize step allows us to categorize this problem as one of a *particle in uniform circular motion*.

Analyze We do not know the orbital speed of the Earth to substitute into Equation 4.14. With the help of Equation 4.15, however, we can recast Equation 4.14 in terms of the period of the Earth's orbit, which we know is one year, and the radius of the Earth's orbit around the Sun, which is 1.496×10^{11} m.

continued

▶ 4.6 continued

Combine Equations 4.14 and 4.15:

$$a_c = \frac{v^2}{r} = \frac{\left(\frac{2\pi r}{T}\right)^2}{r} = \frac{4\pi^2 r}{T^2}$$

Substitute numerical values:

$$a_c = \frac{4\pi^2(1.496 \times 10^{11} \text{ m})}{(1 \text{ yr})^2} \left(\frac{1 \text{ yr}}{3.156 \times 10^7 \text{ s}}\right)^2 = 5.93 \times 10^{-3} \text{ m/s}^2$$

(B) What is the angular speed of the Earth in its orbit around the Sun?

SOLUTION**Analyze**

Substitute numerical values into Equation 4.16:

$$\omega = \frac{2\pi}{1 \text{ yr}} \left(\frac{1 \text{ yr}}{3.156 \times 10^7 \text{ s}}\right) = 1.99 \times 10^{-7} \text{ s}^{-1}$$

Finalize The acceleration in part (A) is much smaller than the free-fall acceleration on the surface of the Earth. An important technique we learned here is replacing the speed v in Equation 4.14 in terms of the period T of the motion. In many problems, it is more likely that T is known rather than v . In part (B), we see that the angular speed of the Earth is very small, which is to be expected because the Earth takes an entire year to go around the circular path once.

4.5 Tangential and Radial Acceleration

Let us consider a more general motion than that presented in Section 4.4. A particle moves to the right along a curved path, and its velocity changes *both* in direction and in magnitude as described in Figure 4.16. In this situation, the velocity vector is always tangent to the path; the acceleration vector \vec{a} , however, is at some angle to the path. At each of three points **A**, **B**, and **C** in Figure 4.16, the dashed blue circles represent the curvature of the actual path at each point. The radius of each circle is equal to the path's radius of curvature at each point.

As the particle moves along the curved path in Figure 4.16, the direction of the total acceleration vector \vec{a} changes from point to point. At any instant, this vector can be resolved into two components based on an origin at the center of the dashed circle corresponding to that instant: a radial component a_r along the radius of the circle and a tangential component a_t perpendicular to this radius. The *total* acceleration vector \vec{a} can be written as the vector sum of the component vectors:

Total acceleration ▶

$$\vec{a} = \vec{a}_r + \vec{a}_t \quad (4.19)$$

The tangential acceleration component causes a change in the speed v of the particle. This component is parallel to the instantaneous velocity, and its magnitude is given by

Tangential acceleration ▶

$$a_t = \left| \frac{dv}{dt} \right| \quad (4.20)$$

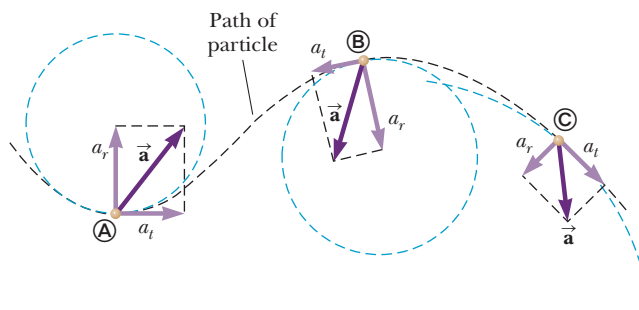


Figure 4.16 The motion of a particle along an arbitrary curved path lying in the xy plane. If the velocity vector \vec{v} (always tangent to the path) changes in direction and magnitude, the components of the acceleration \vec{a} are a tangential component a_t and a radial component a_r .

The radial acceleration component arises from a change in direction of the velocity vector and is given by

$$a_r = -a_c = -\frac{v^2}{r} \quad (4.21) \quad \leftarrow \text{Radial acceleration}$$

where r is the radius of curvature of the path at the point in question. We recognize the magnitude of the radial component of the acceleration as the centripetal acceleration discussed in Section 4.4 with regard to the particle in uniform circular motion model. Even in situations in which a particle moves along a curved path with a varying speed, however, Equation 4.14 can be used for the centripetal acceleration. In this situation, the equation gives the *instantaneous* centripetal acceleration at any time. The negative sign in Equation 4.21 indicates that the direction of the centripetal acceleration is toward the center of the circle representing the radius of curvature. The direction is opposite that of the radial unit vector \hat{r} , which always points away from the origin at the center of the circle.

Because \vec{a}_r and \vec{a}_t are perpendicular component vectors of \vec{a} , it follows that the magnitude of \vec{a} is $a = \sqrt{a_r^2 + a_t^2}$. At a given speed, a_r is large when the radius of curvature is small (as at points **A** and **B** in Fig. 4.16) and small when r is large (as at point **C**). The direction of \vec{a}_t is either in the same direction as \vec{v} (if v is increasing) or opposite \vec{v} (if v is decreasing, as at point **B**).

In uniform circular motion, where v is constant, $a_t = 0$ and the acceleration is always completely radial as described in Section 4.4. In other words, uniform circular motion is a special case of motion along a general curved path. Furthermore, if the direction of \vec{v} does not change, there is no radial acceleration and the motion is one dimensional (in this case, $a_r = 0$, but a_t may not be zero).

Quick Quiz 4.5 A particle moves along a path, and its speed increases with time.

- (i) In which of the following cases are its acceleration and velocity vectors parallel? (a) when the path is circular (b) when the path is straight (c) when the path is a parabola (d) never (ii) From the same choices, in which case are its acceleration and velocity vectors perpendicular everywhere along the path?

Example 4.7 Over the Rise

A car leaves a stop sign and exhibits a constant acceleration of 0.300 m/s^2 parallel to the roadway. The car passes over a rise in the roadway such that the top of the rise is shaped like an arc of a circle of radius 500 m . At the moment the car is at the top of the rise, its velocity vector is horizontal and has a magnitude of 6.00 m/s . What are the magnitude and direction of the total acceleration vector for the car at this instant?

SOLUTION

Conceptualize Conceptualize the situation using Figure 4.17a and any experiences you have had in driving over rises on a roadway.

Categorize Because the accelerating car is moving along a curved path, we categorize this problem as one involving a particle experiencing both tangential and radial acceleration. We recognize that it is a relatively simple substitution problem.

The tangential acceleration vector has magnitude 0.300 m/s^2 and is horizontal. The radial acceleration is given by Equation 4.21, with $v = 6.00 \text{ m/s}$ and $r = 500 \text{ m}$. The radial acceleration vector is directed straight downward.

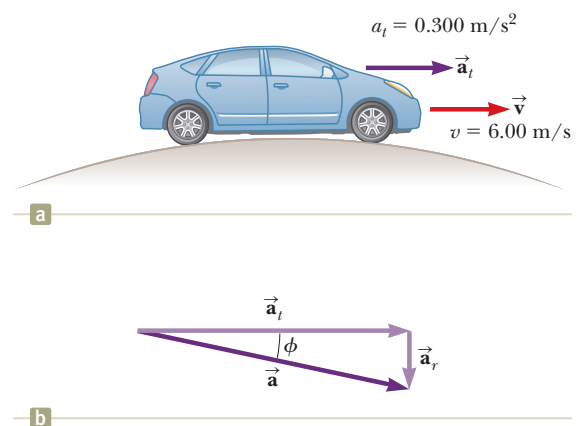


Figure 4.17 (Example 4.7) (a) A car passes over a rise that is shaped like an arc of a circle. (b) The total acceleration vector \vec{a} is the sum of the tangential and radial acceleration vectors \vec{a}_t and \vec{a}_r .

continued

4.7 continued

Evaluate the radial acceleration:

Find the magnitude of \vec{a} :

Find the angle ϕ (see Fig. 4.17b) between \vec{a} and the horizontal:

$$a_r = -\frac{v^2}{r} = -\frac{(6.00 \text{ m/s})^2}{500 \text{ m}} = -0.0720 \text{ m/s}^2$$

$$\begin{aligned} \sqrt{a_r^2 + a_t^2} &= \sqrt{(-0.0720 \text{ m/s}^2)^2 + (0.300 \text{ m/s}^2)^2} \\ &= 0.309 \text{ m/s}^2 \end{aligned}$$

$$\phi = \tan^{-1} \frac{a_r}{a_t} = \tan^{-1} \left(\frac{-0.0720 \text{ m/s}^2}{0.300 \text{ m/s}^2} \right) = -13.5^\circ$$

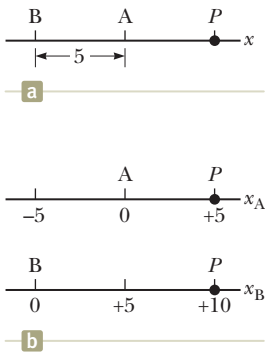


Figure 4.18 Different observers make different measurements. (a) Observer A is located 5 units to the right of Observer B. Both observers measure the position of a particle at P . (b) If both observers see themselves at the origin of their own coordinate system, they disagree on the value of the position of the particle at P .

4.6 Relative Velocity and Relative Acceleration

In this section, we describe how observations made by different observers in different frames of reference are related to one another. A frame of reference can be described by a Cartesian coordinate system for which an observer is at rest with respect to the origin.

Let us conceptualize a sample situation in which there will be different observations for different observers. Consider the two observers A and B along the number line in Figure 4.18a. Observer A is located 5 units to the right of observer B. Both observers measure the position of point P , which is located 5 units to the right of observer A. Suppose each observer decides that he is located at the origin of an x axis as in Figure 4.18b. Notice that the two observers disagree on the value of the position of point P . Observer A claims point P is located at a position with a value of $x_A = +5$, whereas observer B claims it is located at a position with a value of $x_B = +10$. Both observers are correct, even though they make different measurements. Their measurements differ because they are making the measurement from different frames of reference.

Imagine now that observer B in Figure 4.18b is moving to the right along the x_B axis. Now the two measurements are even more different. Observer A claims point P remains at rest at a position with a value of $+5$, whereas observer B claims the position of P continuously changes with time, even passing him and moving behind him! Again, both observers are correct, with the difference in their measurements arising from their different frames of reference.

We explore this phenomenon further by considering two observers watching a man walking on a moving beltway at an airport in Figure 4.19. The woman standing on the moving beltway sees the man moving with a normal walking speed. The woman observing from the stationary floor sees the man moving with a higher speed because the beltway speed combines with his walking speed. Both observers look at the same man and arrive at different values for his speed. Both are correct; the difference in their measurements results from the relative velocity of their frames of reference.

In a more general situation, consider a particle located at point P in Figure 4.20. Imagine that the motion of this particle is being described by two observers, observer A in a reference frame S_A fixed relative to the Earth and a second observer B in a reference frame S_B moving to the right relative to S_A (and therefore relative to the Earth) with a constant velocity \vec{v}_{BA} . In this discussion of relative velocity, we use a double-subscript notation; the first subscript represents what is being observed, and the second represents who is doing the observing. Therefore, the notation \vec{v}_{BA} means the velocity of observer B (and the attached frame S_B) as measured by observer A. With this notation, observer B measures A to be moving to the left with a velocity $\vec{v}_{AB} = -\vec{v}_{BA}$. For purposes of this discussion, let us place each observer at her or his respective origin.

We define the time $t = 0$ as the instant at which the origins of the two reference frames coincide in space. Therefore, at time t , the origins of the reference frames




Figure 4.19 Two observers measure the speed of a man walking on a moving beltway.

will be separated by a distance $v_{BA}t$. We label the position P of the particle relative to observer A with the position vector \vec{r}_{PA} and that relative to observer B with the position vector \vec{r}_{PB} , both at time t . From Figure 4.20, we see that the vectors \vec{r}_{PA} and \vec{r}_{PB} are related to each other through the expression

$$\vec{r}_{PA} = \vec{r}_{PB} + \vec{v}_{BA}t \quad (4.22)$$

By differentiating Equation 4.22 with respect to time, noting that \vec{v}_{BA} is constant, we obtain

$$\begin{aligned} \frac{d\vec{r}_{PA}}{dt} &= \frac{d\vec{r}_{PB}}{dt} + \vec{v}_{BA} \\ \vec{u}_{PA} &= \vec{u}_{PB} + \vec{v}_{BA} \end{aligned} \quad (4.23)$$

where \vec{u}_{PA} is the velocity of the particle at P measured by observer A and \vec{u}_{PB} is its velocity measured by B. (We use the symbol \vec{u} for particle velocity rather than \vec{v} , which we have already used for the relative velocity of two reference frames.) Equations 4.22 and 4.23 are known as **Galilean transformation equations**. They relate the position and velocity of a particle as measured by observers in relative motion. Notice the pattern of the subscripts in Equation 4.23. When relative velocities are added, the inner subscripts (B) are the same and the outer ones (P, A) match the subscripts on the velocity on the left of the equation.

Although observers in two frames measure different velocities for the particle, they measure the *same acceleration* when \vec{v}_{BA} is constant. We can verify that by taking the time derivative of Equation 4.23:

$$\frac{d\vec{u}_{PA}}{dt} = \frac{d\vec{u}_{PB}}{dt} + \frac{d\vec{v}_{BA}}{dt}$$

Because \vec{v}_{BA} is constant, $d\vec{v}_{BA}/dt = 0$. Therefore, we conclude that $\vec{a}_{PA} = \vec{a}_{PB}$ because $\vec{a}_{PA} = d\vec{u}_{PA}/dt$ and $\vec{a}_{PB} = d\vec{u}_{PB}/dt$. That is, the acceleration of the particle measured by an observer in one frame of reference is the same as that measured by any other observer moving with constant velocity relative to the first frame.

Galilean velocity transformation

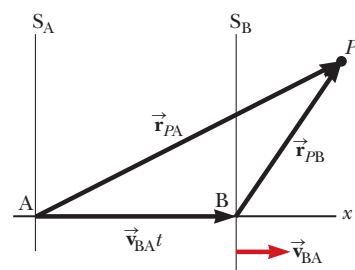


Figure 4.20 A particle located at P is described by two observers, one in the fixed frame of reference S_A and the other in the frame S_B , which moves to the right with a constant velocity \vec{v}_{BA} . The vector \vec{r}_{PA} is the particle's position vector relative to S_A , and \vec{r}_{PB} is its position vector relative to S_B .

Example 4.8 A Boat Crossing a River

A boat crossing a wide river moves with a speed of 10.0 km/h relative to the water. The water in the river has a uniform speed of 5.00 km/h due east relative to the Earth.

(A) If the boat heads due north, determine the velocity of the boat relative to an observer standing on either bank.

SOLUTION

Conceptualize Imagine moving in a boat across a river while the current pushes you down the river. You will not be able to move directly across the river, but will end up downstream as suggested in Figure 4.21a.

Categorize Because of the combined velocities of you relative to the river and the river relative to the Earth, we can categorize this problem as one involving relative velocities.

Analyze We know \vec{v}_{br} , the velocity of the *boat* relative to the *river*, and \vec{v}_{rE} , the velocity of the *river* relative to the *Earth*. What we must find is \vec{v}_{bE} , the velocity of the *boat* relative to the *Earth*. The relationship between these three quantities is $\vec{v}_{bE} = \vec{v}_{br} + \vec{v}_{rE}$. The terms in the equation must be manipulated as vector quantities; the vectors are shown in Figure 4.21a. The quantity \vec{v}_{br} is due north; \vec{v}_{rE} is due east; and the vector sum of the two, \vec{v}_{bE} , is at an angle θ as defined in Figure 4.21a.

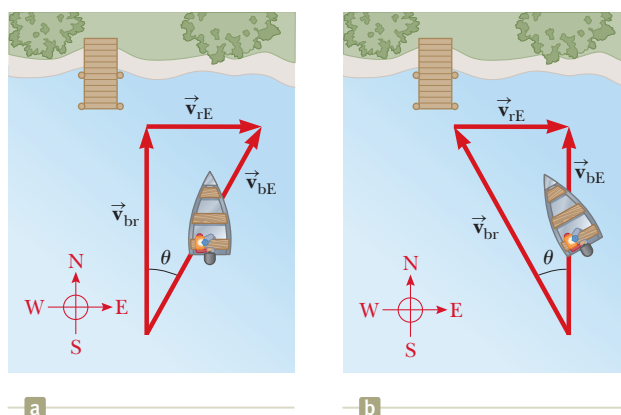


Figure 4.21 (Example 4.8) (a) A boat aims directly across a river and ends up downstream. (b) To move directly across the river, the boat must aim upstream.

continued

4.8 continued

Find the speed v_{bE} of the boat relative to the Earth using the Pythagorean theorem:

$$v_{bE} = \sqrt{v_{br}^2 + v_{rE}^2} = \sqrt{(10.0 \text{ km/h})^2 + (5.00 \text{ km/h})^2} \\ = 11.2 \text{ km/h}$$

Find the direction of \vec{v}_{bE} :

$$\theta = \tan^{-1}\left(\frac{v_{rE}}{v_{br}}\right) = \tan^{-1}\left(\frac{5.00}{10.0}\right) = 26.6^\circ$$

Finalize The boat is moving at a speed of 11.2 km/h in the direction 26.6° east of north relative to the Earth. Notice that the speed of 11.2 km/h is faster than your boat speed of 10.0 km/h. The current velocity adds to yours to give you a higher speed. Notice in Figure 4.21a that your resultant velocity is at an angle to the direction straight across the river, so you will end up downstream, as we predicted.

(B) If the boat travels with the same speed of 10.0 km/h relative to the river and is to travel due north as shown in Figure 4.21b, what should its heading be?

SOLUTION

Conceptualize/Categorize This question is an extension of part (A), so we have already conceptualized and categorized the problem. In this case, however, we must aim the boat upstream so as to go straight across the river.

Analyze The analysis now involves the new triangle shown in Figure 4.21b. As in part (A), we know \vec{v}_{rE} and the magnitude of the vector \vec{v}_{br} , and we want \vec{v}_{bE} to be directed across the river. Notice the difference between the triangle in Figure 4.21a and the one in Figure 4.21b: the hypotenuse in Figure 4.21b is no longer \vec{v}_{bE} .

Use the Pythagorean theorem to find v_{bE} :

$$v_{bE} = \sqrt{v_{br}^2 - v_{rE}^2} = \sqrt{(10.0 \text{ km/h})^2 - (5.00 \text{ km/h})^2} = 8.66 \text{ km/h}$$

Find the direction in which the boat is heading:

$$\theta = \tan^{-1}\left(\frac{v_{rE}}{v_{bE}}\right) = \tan^{-1}\left(\frac{5.00}{8.66}\right) = 30.0^\circ$$

Finalize The boat must head upstream so as to travel directly northward across the river. For the given situation, the boat must steer a course 30.0° west of north. For faster currents, the boat must be aimed upstream at larger angles.

WHAT IF? Imagine that the two boats in parts (A) and (B) are racing across the river. Which boat arrives at the opposite bank first?

Answer In part (A), the velocity of 10 km/h is aimed directly across the river. In part (B), the velocity that is directed across the river has a magnitude of only 8.66 km/h. Therefore, the boat in part (A) has a larger velocity component directly across the river and arrives first.

Summary

Definitions

The **displacement vector** $\Delta\vec{r}$ for a particle is the difference between its final position vector and its initial position vector:

$$\Delta\vec{r} \equiv \vec{r}_f - \vec{r}_i \quad (4.1)$$

The **average velocity** of a particle during the time interval Δt is defined as the displacement of the particle divided by the time interval:

$$\vec{v}_{\text{avg}} \equiv \frac{\Delta\vec{r}}{\Delta t} \quad (4.2)$$

The **instantaneous velocity** of a particle is defined as the limit of the average velocity as Δt approaches zero:

$$\vec{v} \equiv \lim_{\Delta t \rightarrow 0} \frac{\Delta\vec{r}}{\Delta t} = \frac{d\vec{r}}{dt} \quad (4.3)$$

The **average acceleration** of a particle is defined as the change in its instantaneous velocity vector divided by the time interval Δt during which that change occurs:

$$\vec{a}_{\text{avg}} \equiv \frac{\Delta \vec{v}}{\Delta t} = \frac{\vec{v}_f - \vec{v}_i}{t_f - t_i} \quad (4.4)$$

The **instantaneous acceleration** of a particle is defined as the limiting value of the average acceleration as Δt approaches zero:

$$\vec{a} \equiv \lim_{\Delta t \rightarrow 0} \frac{\Delta \vec{v}}{\Delta t} = \frac{d\vec{v}}{dt} \quad (4.5)$$

Projectile motion is one type of two-dimensional motion, exhibited by an object launched into the air near the Earth's surface and experiencing free fall. This common motion can be analyzed by applying the particle under constant velocity model to the motion of the projectile in the x direction and the particle under constant acceleration model ($a_y = -g$) in the y direction.

A particle moving in a circular path with constant speed is exhibiting **uniform circular motion**.

Concepts and Principles

If a particle moves with *constant* acceleration \vec{a} and has velocity \vec{v}_i and position \vec{r}_i at $t = 0$, its velocity and position vectors at some later time t are

$$\vec{v}_f = \vec{v}_i + \vec{a}t \quad (4.8)$$

$$\vec{r}_f = \vec{r}_i + \vec{v}_i t + \frac{1}{2} \vec{a} t^2 \quad (4.9)$$

For two-dimensional motion in the xy plane under constant acceleration, each of these vector expressions is equivalent to two component expressions: one for the motion in the x direction and one for the motion in the y direction.

It is useful to think of projectile motion in terms of a combination of two analysis models: (1) the particle under constant velocity model in the x direction and (2) the particle under constant acceleration model in the vertical direction with a constant downward acceleration of magnitude $g = 9.80 \text{ m/s}^2$.

A particle in uniform circular motion undergoes a radial acceleration \vec{a}_r because the direction of \vec{v} changes in time. This acceleration is called **centripetal acceleration**, and its direction is always toward the center of the circle.

If a particle moves along a curved path in such a way that both the magnitude and the direction of \vec{v} change in time, the particle has an acceleration vector that can be described by two component vectors: (1) a radial component vector \vec{a}_r that causes the change in direction of \vec{v} and (2) a tangential component vector \vec{a}_t that causes the change in magnitude of \vec{v} . The magnitude of \vec{a}_r is v^2/r , and the magnitude of \vec{a}_t is $|dv/dt|$.

The velocity \vec{u}_{PA} of a particle measured in a fixed frame of reference S_A can be related to the velocity \vec{u}_{PB} of the same particle measured in a moving frame of reference S_B by

$$\vec{u}_{PA} = \vec{u}_{PB} + \vec{v}_{BA} \quad (4.23)$$

where \vec{v}_{BA} is the velocity of S_B relative to S_A .

Analysis Model for Problem Solving

Particle in Uniform Circular Motion If a particle moves in a circular path of radius r with a constant speed v , the magnitude of its centripetal acceleration is given by

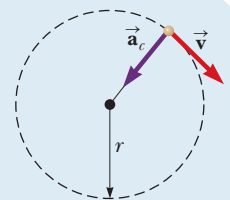
$$a_c = \frac{v^2}{r} \quad (4.14)$$

and the **period** of the particle's motion is given by

$$T = \frac{2\pi r}{v} \quad (4.15)$$

The **angular speed** of the particle is

$$\omega = \frac{2\pi}{T} \quad (4.16)$$



Objective Questions

1. denotes answer available in *Student Solutions Manual/Study Guide*

1. Figure OQ4.1 shows a bird's-eye view of a car going around a highway curve. As the car moves from point 1 to point 2, its speed doubles. Which of the vectors (a) through (e) shows the direction of the car's average acceleration between these two points?

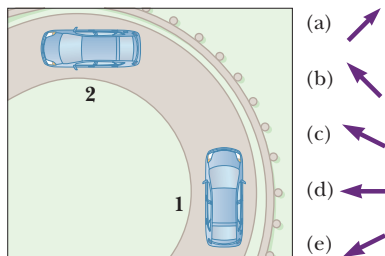


Figure OQ4.1

2. Entering his dorm room, a student tosses his book bag to the right and upward at an angle of 45° with the horizontal (Fig. OQ4.2). Air resistance does not affect the bag. The bag moves through point A immediately after it leaves the student's hand, through point B at the top of its flight, and through point C immediately before it lands on the top bunk bed. (i) Rank the following horizontal and vertical velocity components from the largest to the smallest. (a) v_{Ax} (b) v_{Ay} (c) v_{Bx} (d) v_{By} (e) v_{Cy} . Note that zero is larger than a negative number. If two quantities are equal, show them as equal in your list. (ii) Similarly, rank the following acceleration components. (a) a_{Ax} (b) a_{Ay} (c) a_{Bx} (d) a_{By} (e) a_{Cy} .

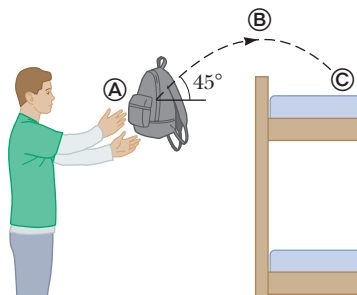


Figure OQ4.2

3. A student throws a heavy red ball horizontally from a balcony of a tall building with an initial speed v_i . At the same time, a second student drops a lighter blue ball from the balcony. Neglecting air resistance, which statement is true? (a) The blue ball reaches the ground first. (b) The balls reach the ground at the same instant. (c) The red ball reaches the ground first. (d) Both balls hit the ground with the same speed. (e) None of statements (a) through (d) is true.
4. A projectile is launched on the Earth with a certain initial velocity and moves without air resistance. Another projectile is launched with the same initial velocity on the Moon, where the acceleration due to gravity is one-sixth as large. How does the maximum altitude of the projectile on the Moon compare with that of the projectile on the Earth? (a) It is one-sixth as large. (b) It is the same. (c) It is $\sqrt{6}$ times larger. (d) It is 6 times larger. (e) It is 36 times larger.
5. Does a car moving around a circular track with constant speed have (a) zero acceleration, (b) an acceleration in the direction of its velocity, (c) an acceleration directed away from the center of its path, (d) an acceleration directed toward the center of its path, or (e) an acceleration with a direction that cannot be determined from the given information?
6. An astronaut hits a golf ball on the Moon. Which of the following quantities, if any, remain constant as a ball travels through the vacuum there? (a) speed (b) acceleration (c) horizontal component of velocity (d) vertical component of velocity (e) velocity
7. A projectile is launched on the Earth with a certain initial velocity and moves without air resistance. Another projectile is launched with the same initial velocity on the Moon, where the acceleration due to gravity is one-sixth as large. How does the range of the projectile on the Moon compare with that of the projectile on the Earth? (a) It is one-sixth as large. (b) It is the same. (c) It is $\sqrt{6}$ times larger. (d) It is 6 times larger. (e) It is 36 times larger.
8. A girl, moving at 8 m/s on in-line skates, is overtaking a boy moving at 5 m/s as they both skate on a straight path. The boy tosses a ball backward toward the girl, giving it speed 12 m/s relative to him. What is the speed of the ball relative to the girl, who catches it? (a) $(8 + 5 + 12)$ m/s (b) $(8 - 5 - 12)$ m/s (c) $(8 + 5 - 12)$ m/s (d) $(8 - 5 + 12)$ m/s (e) $(-8 + 5 + 12)$ m/s
9. A sailor drops a wrench from the top of a sailboat's vertical mast while the boat is moving rapidly and steadily straight forward. Where will the wrench hit the deck? (a) ahead of the base of the mast (b) at the base of the mast (c) behind the base of the mast (d) on the windward side of the base of the mast (e) None of the choices (a) through (d) is true.
10. A baseball is thrown from the outfield toward the catcher. When the ball reaches its highest point, which statement is true? (a) Its velocity and its acceleration are both zero. (b) Its velocity is not zero, but its acceleration is zero. (c) Its velocity is perpendicular to its acceleration. (d) Its acceleration depends on the angle at which the ball was thrown. (e) None of statements (a) through (d) is true.
11. A set of keys on the end of a string is swung steadily in a horizontal circle. In one trial, it moves at speed v in a circle of radius r . In a second trial, it moves at a higher speed $4v$ in a circle of radius $4r$. In the second trial, how does the period of its motion compare with its period in the first trial? (a) It is the same as in the first trial. (b) It is 4 times larger. (c) It is one-fourth as large. (d) It is 16 times larger. (e) It is one-sixteenth as large.

12. A rubber stopper on the end of a string is swung steadily in a horizontal circle. In one trial, it moves at speed v in a circle of radius r . In a second trial, it moves at a higher speed $3v$ in a circle of radius $3r$. In this second trial, is its acceleration (a) the same as in the first trial, (b) three times larger, (c) one-third as large, (d) nine times larger, or (e) one-ninth as large?
13. In which of the following situations is the moving object appropriately modeled as a projectile? Choose all correct answers. (a) A shoe is tossed in an arbitrary direction. (b) A jet airplane crosses the sky with its engines thrusting the plane forward. (c) A rocket leaves the launch pad. (d) A rocket moves through the sky, at much less than the speed of sound, after its fuel has been used up. (e) A diver throws a stone under water.
14. A certain light truck can go around a curve having a radius of 150 m with a maximum speed of 32.0 m/s. To have the same acceleration, at what maximum speed can it go around a curve having a radius of 75.0 m? (a) 64 m/s (b) 45 m/s (c) 32 m/s (d) 23 m/s (e) 16 m/s

Conceptual Questions

1. denotes answer available in *Student Solutions Manual/Study Guide*

- 1.** A spacecraft drifts through space at a constant velocity. Suddenly, a gas leak in the side of the spacecraft gives it a constant acceleration in a direction perpendicular to the initial velocity. The orientation of the spacecraft does not change, so the acceleration remains perpendicular to the original direction of the velocity. What is the shape of the path followed by the spacecraft in this situation?
2. An ice skater is executing a figure eight, consisting of two identically shaped, tangent circular paths. Throughout the first loop she increases her speed uniformly, and during the second loop she moves at a constant speed. Draw a motion diagram showing her velocity and acceleration vectors at several points along the path of motion.
- 3.** If you know the position vectors of a particle at two points along its path and also know the time interval during which it moved from one point to the other, can you determine the particle's instantaneous velocity? Its average velocity? Explain.
4. Describe how a driver can steer a car traveling at constant speed so that (a) the acceleration is zero or (b) the magnitude of the acceleration remains constant.
- 5.** A projectile is launched at some angle to the horizontal with some initial speed v_i , and air resistance is negligible. (a) Is the projectile a freely falling body? (b) What is its acceleration in the vertical direction? (c) What is its acceleration in the horizontal direction?
6. Construct motion diagrams showing the velocity and acceleration of a projectile at several points along its path, assuming (a) the projectile is launched horizontally and (b) the projectile is launched at an angle θ with the horizontal.
- 7.** Explain whether or not the following particles have an acceleration: (a) a particle moving in a straight line with constant speed and (b) a particle moving around a curve with constant speed.

Problems

ENHANCED

WebAssign

The problems found in this chapter may be assigned online in Enhanced WebAssign

1. straightforward; 2. intermediate; 3. challenging

1. full solution available in the *Student Solutions Manual/Study Guide*

AMT

Analysis Model tutorial available in Enhanced WebAssign

GP

Guided Problem

M

Master It tutorial available in Enhanced WebAssign

W

Watch It video solution available in Enhanced WebAssign

Section 4.1 The Position, Velocity, and Acceleration Vectors

- 1.** A motorist drives south at 20.0 m/s for 3.00 min, then turns west and travels at 25.0 m/s for 2.00 min, and finally travels northwest at 30.0 m/s for 1.00 min. For this 6.00-min trip, find (a) the total vector displacement, (b) the average speed, and (c) the average velocity. Let the positive x axis point east.
2. When the Sun is directly overhead, a hawk dives toward the ground with a constant velocity of 5.00 m/s at 60.0° below the horizontal. Calculate the speed of its shadow on the level ground.
3. Suppose the position vector for a particle is given as a function of time by $\vec{r}(t) = x(t)\hat{i} + y(t)\hat{j}$, with $x(t) = at + b$ and $y(t) = ct^2 + d$, where $a = 1.00$ m/s, $b = 1.00$ m, $c = 0.125$ m/s², and $d = 1.00$ m. (a) Calculate the average velocity during the time interval from $t = 2.00$ s to $t = 4.00$ s. (b) Determine the velocity and the speed at $t = 2.00$ s.
4. The coordinates of an object moving in the xy plane vary with time according to the equations $x = -5.00 \sin \omega t$ and $y = 4.00 - 5.00 \cos \omega t$, where ω is a constant, x and y are in meters, and t is in seconds. (a) Determine the components of velocity of the object at $t = 0$. (b) Determine the components of acceleration of the object at $t = 0$. (c) Write expressions for the position vector, the velocity vector, and the acceleration vector of the object at any time $t > 0$. (d) Describe the path of the object in an xy plot.

5. A golf ball is hit off a tee at the edge of a cliff. Its x and y coordinates as functions of time are given by $x = 18.0t$ and $y = 4.00t - 4.90t^2$, where x and y are in meters and t is in seconds. (a) Write a vector expression for the ball's position as a function of time, using the unit vectors \hat{i} and \hat{j} . By taking derivatives, obtain expressions for (b) the velocity vector \vec{v} as a function of time and (c) the acceleration vector \vec{a} as a function of time. (d) Next use unit-vector notation to write expressions for the position, the velocity, and the acceleration of the golf ball at $t = 3.00$ s.

Section 4.2 Two-Dimensional Motion with Constant Acceleration

- 6.** A particle initially located at the origin has an acceleration of $\vec{a} = 3.00\hat{j}$ m/s² and an initial velocity of $\vec{v}_i = 5.00\hat{i}$ m/s. Find (a) the vector position of the particle at any time t , (b) the velocity of the particle at any time t , (c) the coordinates of the particle at $t = 2.00$ s, and (d) the speed of the particle at $t = 2.00$ s.
- 7.** The vector position of a particle varies in time according to the expression $\vec{r} = 3.00\hat{i} - 6.00t^2\hat{j}$, where \vec{r} is in meters and t is in seconds. (a) Find an expression for the velocity of the particle as a function of time. (b) Determine the acceleration of the particle as a function of time. (c) Calculate the particle's position and velocity at $t = 1.00$ s.
8. It is not possible to see very small objects, such as viruses, using an ordinary light microscope. An electron microscope, however, can view such objects using an electron beam instead of a light beam. Electron microscopy has proved invaluable for investigations of viruses, cell membranes and subcellular structures, bacterial surfaces, visual receptors, chloroplasts, and the contractile properties of muscles. The "lenses" of an electron microscope consist of electric and magnetic fields that control the electron beam. As an example of the manipulation of an electron beam, consider an electron traveling away from the origin along the x axis in the xy plane with initial velocity $\vec{v}_i = v_i\hat{i}$. As it passes through the region $x = 0$ to $x = d$, the electron experiences acceleration $\vec{a} = a_x\hat{i} + a_y\hat{j}$, where a_x and a_y are constants. For the case $v_i = 1.80 \times 10^7$ m/s, $a_x = 8.00 \times 10^{14}$ m/s², and $a_y = 1.60 \times 10^{15}$ m/s², determine at $x = d = 0.010$ m (a) the position of the electron, (b) the velocity of the electron, (c) the speed of the electron, and (d) the direction of travel of the electron (i.e., the angle between its velocity and the x axis).
- 9.** A fish swimming in a horizontal plane has velocity $\vec{v}_i = (4.00\hat{i} + 1.00\hat{j})$ m/s at a point in the ocean where the position relative to a certain rock is $\vec{r}_i = (10.0\hat{i} - 4.00\hat{j})$ m. After the fish swims with constant acceleration for 20.0 s, its velocity is $\vec{v} = (20.0\hat{i} - 5.00\hat{j})$ m/s. (a) What are the components of the acceleration of the fish? (b) What is the direction of its acceleration with respect to unit vector \hat{i} ? (c) If the fish maintains constant acceleration, where is it at $t = 25.0$ s and in what direction is it moving?
- 10. Review.** A snowmobile is originally at the point with position vector 29.0 m at 95.0° counterclockwise from

the x axis, moving with velocity 4.50 m/s at 40.0°. It moves with constant acceleration 1.90 m/s² at 200°. After 5.00 s have elapsed, find (a) its velocity and (b) its position vector.

Section 4.3 Projectile Motion

Note: Ignore air resistance in all problems and take $g = 9.80$ m/s² at the Earth's surface.

- 11.** Mayan kings and many school sports teams are named for the puma, cougar, or mountain lion—*Felis concolor*—the best jumper among animals. It can jump to a height of 12.0 ft when leaving the ground at an angle of 45.0°. With what speed, in SI units, does it leave the ground to make this leap?
- 12.** An astronaut on a strange planet finds that she can jump a maximum horizontal distance of 15.0 m if her initial speed is 3.00 m/s. What is the free-fall acceleration on the planet?
- 13.** In a local bar, a customer slides an empty beer mug down the counter for a refill. The height of the counter is 1.22 m. The mug slides off the counter and strikes the floor 1.40 m from the base of the counter. (a) With what velocity did the mug leave the counter? (b) What was the direction of the mug's velocity just before it hit the floor?
- 14.** In a local bar, a customer slides an empty beer mug down the counter for a refill. The height of the counter is h . The mug slides off the counter and strikes the floor at distance d from the base of the counter. (a) With what velocity did the mug leave the counter? (b) What was the direction of the mug's velocity just before it hit the floor?
- 15.** A projectile is fired in such a way that its horizontal range is equal to three times its maximum height. What is the angle of projection?
- 16.** To start an avalanche on a mountain slope, an artillery shell is fired with an initial velocity of 300 m/s at 55.0° above the horizontal. It explodes on the mountainside 42.0 s after firing. What are the x and y coordinates of the shell where it explodes, relative to its firing point?
- 17.** Chinook salmon are able to move through water especially fast by jumping out of the water periodically. This behavior is called *porpoising*. Suppose a salmon swimming in still water jumps out of the water with velocity 6.26 m/s at 45.0° above the horizontal, sails through the air a distance L before returning to the water, and then swims the same distance L underwater in a straight, horizontal line with velocity 3.58 m/s before jumping out again. (a) Determine the average velocity of the fish for the entire process of jumping and swimming underwater. (b) Consider the time interval required to travel the entire distance of $2L$. By what percentage is this time interval reduced by the jumping/swimming process compared with simply swimming underwater at 3.58 m/s?
- 18.** A rock is thrown upward from level ground in such a way that the maximum height of its flight is equal to its horizontal range R . (a) At what angle θ is the rock thrown? (b) In terms of its original range R , what is the range R_{\max} the rock can attain if it is launched at

the same speed but at the optimal angle for maximum range? (c) **What If?** Would your answer to part (a) be different if the rock is thrown with the same speed on a different planet? Explain.

19. The speed of a projectile when it reaches its maximum height is one-half its speed when it is at half its maximum height. What is the initial projection angle of the projectile?
20. A ball is tossed from an upper-story window of a building. The ball is given an initial velocity of 8.00 m/s at an angle of 20.0° below the horizontal. It strikes the ground 3.00 s later. (a) How far horizontally from the base of the building does the ball strike the ground? (b) Find the height from which the ball was thrown. (c) How long does it take the ball to reach a point 10.0 m below the level of launching?
21. A firefighter, a distance d from a burning building, directs a stream of water from a fire hose at angle θ_i above the horizontal as shown in Figure P4.21. If the initial speed of the stream is v_i , at what height h does the water strike the building?

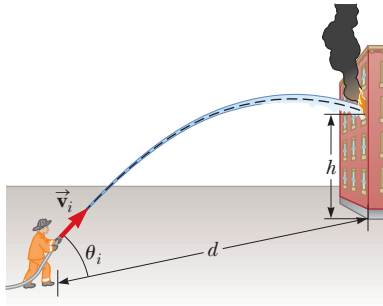


Figure P4.21

22. A landscape architect is planning an artificial waterfall in a city park. Water flowing at 1.70 m/s will leave the end of a horizontal channel at the top of a vertical wall $h = 2.35$ m high, and from there it will fall into a pool (Fig. P4.22). (a) Will the space behind the waterfall be wide enough for a pedestrian walkway? (b) To sell her plan to the city council, the architect wants to build a model to standard scale, which is one-twelfth actual size. How fast should the water flow in the channel in the model?
23. **AMT** A placekicker must kick a football from a point 36.0 m (about 40 yards) from the goal. Half the crowd hopes **M** the ball will clear the crossbar, which is 3.05 m high. When kicked, the ball leaves the ground with a speed of 20.0 m/s at an angle of 53.0° to the horizontal. (a) By how much does the ball clear or fall short of clearing the crossbar? (b) Does the ball approach the crossbar while still rising or while falling?
24. A basketball star covers 2.80 m horizontally in a jump to dunk the ball (Fig. P4.24a). His motion through space can be modeled precisely as that of a particle at his *center*

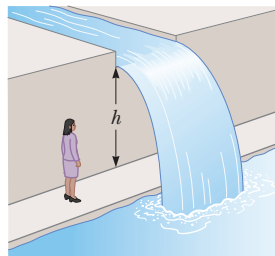


Figure P4.22

of mass, which we will define in Chapter 9. His center of mass is at elevation 1.02 m when he leaves the floor. It reaches a maximum height of 1.85 m above the floor and is at elevation 0.900 m when he touches down again. Determine (a) his time of flight (his “hang time”), (b) his horizontal and (c) vertical velocity components at the instant of takeoff, and (d) his takeoff angle. (e) For comparison, determine the hang time of a whitetail deer making a jump (Fig. P4.24b) with center-of-mass elevations $y_i = 1.20$ m, $y_{\max} = 2.50$ m, and $y_f = 0.700$ m.




Figure P4.24

25. A playground is on the flat roof of a city school, 6.00 m above the street below (Fig. P4.25). The vertical wall of the building is $h = 7.00$ m high, forming a 1-m-high railing around the playground. A ball has fallen to the street below, and a passerby returns it by launching it at an angle of $\theta = 53.0^\circ$ above the horizontal at a point $d = 24.0$ m from the base of the building wall. The ball takes 2.20 s to reach a point vertically above the wall. (a) Find the speed at which the ball was launched. (b) Find the vertical distance by which the ball clears the wall. (c) Find the horizontal distance from the wall to the point on the roof where the ball lands.

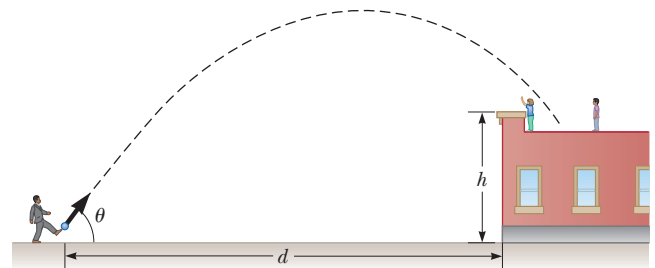


Figure P4.25

26. The motion of a human body through space can be modeled as the motion of a particle at the body’s center of mass as we will study in Chapter 9. The components of the displacement of an athlete’s center of mass from the beginning to the end of a certain jump are described by the equations

$$x_f = 0 + (11.2 \text{ m/s})(\cos 18.5^\circ)t$$

$$0.360 \text{ m} = 0.840 \text{ m} + (11.2 \text{ m/s})(\sin 18.5^\circ)t - \frac{1}{2}(9.80 \text{ m/s}^2)t^2$$

where t is in seconds and is the time at which the athlete ends the jump. Identify (a) the athlete’s position and (b) his vector velocity at the takeoff point. (c) How far did he jump?

27. **W** A soccer player kicks a rock horizontally off a 40.0-m-high cliff into a pool of water. If the player

hears the sound of the splash 3.00 s later, what was the initial speed given to the rock? Assume the speed of sound in air is 343 m/s.

28. A projectile is fired from the top of a cliff of height h above the ocean below. The projectile is fired at an angle θ above the horizontal and with an initial speed v_i . (a) Find a symbolic expression in terms of the variables v_i , g , and θ for the time at which the projectile reaches its maximum height. (b) Using the result of part (a), find an expression for the maximum height h_{max} above the ocean attained by the projectile in terms of h , v_i , g , and θ .

29. **GP** A student stands at the edge of a cliff and throws a stone horizontally over the edge with a speed of $v_i = 18.0$ m/s. The cliff is $h = 50.0$ m above a body of water as shown in Figure P4.29. (a) What are the coordinates of the initial position of the stone? (b) What are the components of the initial velocity of the stone? (c) What is the appropriate analysis model for the vertical motion of the stone? (d) What is the appropriate analysis model for the horizontal motion of the stone? (e) Write symbolic equations for the x and y components of the velocity of the stone as a function of time. (f) Write symbolic equations for the position of the stone as a function of time. (g) How long after being released does the stone strike the water below the cliff? (h) With what speed and angle of impact does the stone land?

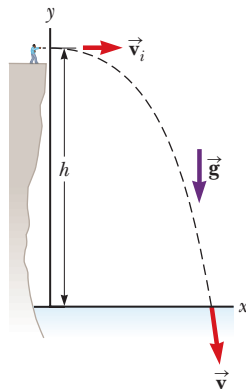


Figure P4.29

30. The record distance in the sport of throwing cowpats is 81.1 m. This record toss was set by Steve Urner of the United States in 1981. Assuming the initial launch angle was 45° and neglecting air resistance, determine (a) the initial speed of the projectile and (b) the total time interval the projectile was in flight. (c) How would the answers change if the range were the same but the launch angle were greater than 45° ? Explain.
31. A boy stands on a diving board and tosses a stone into a swimming pool. The stone is thrown from a height of 2.50 m above the water surface with a velocity of 4.00 m/s at an angle of 60.0° above the horizontal. As the stone strikes the water surface, it immediately slows down to exactly half the speed it had when it struck the water and maintains that speed while in the water. After the stone enters the water, it moves in a straight line in the direction of the velocity it had when it struck the water. If the pool is 3.00 m deep, how much time elapses between when the stone is thrown and when it strikes the bottom of the pool?
32. **M** A home run is hit in such a way that the baseball just clears a wall 21.0 m high, located 130 m from home plate. The ball is hit at an angle of 35.0° to the horizontal, and air resistance is negligible. Find (a) the

initial speed of the ball, (b) the time it takes the ball to reach the wall, and (c) the velocity components and the speed of the ball when it reaches the wall. (Assume the ball is hit at a height of 1.00 m above the ground.)

Section 4.4 Analysis Model: Particle in Uniform Circular Motion

Note: Problems 6 and 13 in Chapter 6 can also be assigned with this section.

33. The athlete shown in Figure P4.33 rotates a 1.00-kg discus along a circular path of radius 1.06 m. The maximum speed of the discus is 20.0 m/s. Determine the magnitude of the maximum radial acceleration of the discus.



Adrian Dennis/AFP/Getty Images

Figure P4.33

34. In Example 4.6, we found the centripetal acceleration of the Earth as it revolves around the Sun. From information on the endpapers of this book, compute the centripetal acceleration of a point on the surface of the Earth at the equator caused by the rotation of the Earth about its axis.
35. Casting molten metal is important in many industrial processes. *Centrifugal casting* is used for manufacturing pipes, bearings, and many other structures. A variety of sophisticated techniques have been invented, but the basic idea is as illustrated in Figure P4.35. A cylindrical enclosure is rotated rapidly and steadily about a horizontal axis. Molten metal is poured into the rotating cylinder and then cooled, forming the finished product. Turning the cylinder at a high rotation rate forces the solidifying metal strongly to the outside. Any bubbles are displaced toward the axis, so unwanted voids will not be present in the casting. Sometimes it is desirable to form a composite casting, such as for a bearing. Here a strong steel outer surface is poured and then inside it a lining of special low-friction metal. In some applications, a very strong metal is given a coating of corrosion-resistant metal. Centrifugal casting results in strong bonding between the layers.

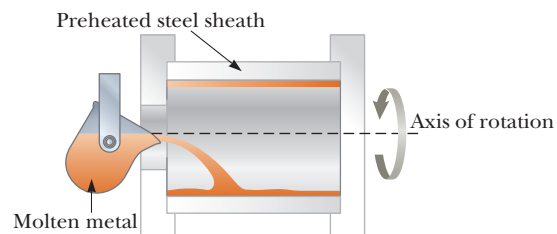


Figure P4.35

Suppose a copper sleeve of inner radius 2.10 cm and outer radius 2.20 cm is to be cast. To eliminate bubbles and give high structural integrity, the centripetal acceleration of each bit of metal should be at least $100g$. What rate of rotation is required? State the answer in revolutions per minute.

36. A tire 0.500 m in radius rotates at a constant rate of 200 rev/min. Find the speed and acceleration of a small stone lodged in the tread of the tire (on its outer edge).
37. **Review.** The 20- g centrifuge at NASA's Ames Research Center in Mountain View, California, is a horizontal, cylindrical tube 58.0 ft long and is represented in Figure P4.37. Assume an astronaut in training sits in a seat at one end, facing the axis of rotation 29.0 ft away. Determine the rotation rate, in revolutions per second, required to give the astronaut a centripetal acceleration of $20.0g$.

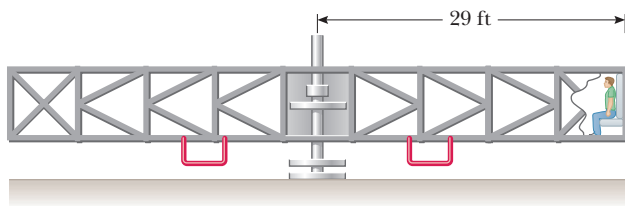


Figure P4.37

38. An athlete swings a ball, connected to the end of a chain, in a horizontal circle. The athlete is able to rotate the ball at the rate of 8.00 rev/s when the length of the chain is 0.600 m. When he increases the length to 0.900 m, he is able to rotate the ball only 6.00 rev/s. (a) Which rate of rotation gives the greater speed for the ball? (b) What is the centripetal acceleration of the ball at 8.00 rev/s? (c) What is the centripetal acceleration at 6.00 rev/s?
39. The astronaut orbiting the Earth in Figure P4.39 is preparing to dock with a Westar VI satellite. The satellite is in a circular orbit 600 km above the Earth's surface, where the free-fall acceleration is 8.21 m/s^2 . Take the radius of the Earth as 6 400 km. Determine the speed of the satellite and the time interval required to complete one orbit around the Earth, which is the period of the satellite.



Figure P4.39

Section 4.5 Tangential and Radial Acceleration

40. Figure P4.40 represents the total acceleration of a particle moving clockwise in a circle of radius 2.50 m at a certain instant of time. For that instant, find (a) the radial acceleration of the particle, (b) the speed of the particle, and (c) its tangential acceleration.

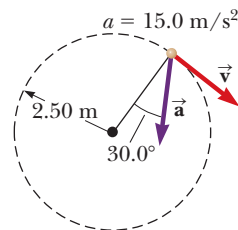


Figure P4.40

41. **M** A train slows down as it rounds a sharp horizontal turn, going from 90.0 km/h to 50.0 km/h in the 15.0 s it takes to round the bend. The radius of the curve is 150 m. Compute the acceleration at the moment the train speed reaches 50.0 km/h. Assume the train continues to slow down at this time at the same rate.
42. A ball swings counterclockwise in a vertical circle at the end of a rope 1.50 m long. When the ball is 36.9° past the lowest point on its way up, its total acceleration is $(-22.5\hat{i} + 20.2\hat{j}) \text{ m/s}^2$. For that instant, (a) sketch a vector diagram showing the components of its acceleration, (b) determine the magnitude of its radial acceleration, and (c) determine the speed and velocity of the ball.
43. (a) Can a particle moving with instantaneous speed 3.00 m/s on a path with radius of curvature 2.00 m have an acceleration of magnitude 6.00 m/s^2 ? (b) Can it have an acceleration of magnitude 4.00 m/s^2 ? In each case, if the answer is yes, explain how it can happen; if the answer is no, explain why not.

Section 4.6 Relative Velocity and Relative Acceleration

44. The pilot of an airplane notes that the compass indicates a heading due west. The airplane's speed relative to the air is 150 km/h. The air is moving in a wind at 30.0 km/h toward the north. Find the velocity of the airplane relative to the ground.
45. An airplane maintains a speed of 630 km/h relative to the air it is flying through as it makes a trip to a city 750 km away to the north. (a) What time interval is required for the trip if the plane flies through a headwind blowing at 35.0 km/h toward the south? (b) What time interval is required if there is a tailwind with the same speed? (c) What time interval is required if there is a crosswind blowing at 35.0 km/h to the east relative to the ground?
46. A moving beltway at an airport has a speed v_1 and a length L . A woman stands on the beltway as it moves from one end to the other, while a man in a hurry to reach his flight walks on the beltway with a speed of v_2 relative to the moving beltway. (a) What time interval is required for the woman to travel the distance L ? (b) What time interval is required for the man to travel this distance? (c) A second beltway is located next to the first one. It is identical to the first one but moves in the opposite direction at speed v_1 . Just as the man steps onto the beginning of the beltway and begins to walk at speed v_2 relative to his beltway, a child steps on the other end of the adjacent beltway. The child stands at rest relative to this second beltway. How long after stepping on the beltway does the man pass the child?
47. A police car traveling at 95.0 km/h is traveling west, chasing a motorist traveling at 80.0 km/h. (a) What is the velocity of the motorist relative to the police car? (b) What is the velocity of the police car relative to the motorist? (c) If they are originally 250 m apart, in what time interval will the police car overtake the motorist?
48. **M** A car travels due east with a speed of 50.0 km/h. Raindrops are falling at a constant speed vertically with

respect to the Earth. The traces of the rain on the side windows of the car make an angle of 60.0° with the vertical. Find the velocity of the rain with respect to (a) the car and (b) the Earth.

49. A bolt drops from the ceiling of a moving train car that is accelerating northward at a rate of 2.50 m/s^2 . (a) What is the acceleration of the bolt relative to the train car? (b) What is the acceleration of the bolt relative to the Earth? (c) Describe the trajectory of the bolt as seen by an observer inside the train car. (d) Describe the trajectory of the bolt as seen by an observer fixed on the Earth.

50. A river has a steady speed of 0.500 m/s . A student swims upstream a distance of 1.00 km and swims back to the starting point. (a) If the student can swim at a speed of 1.20 m/s in still water, how long does the trip take? (b) How much time is required in still water for the same length swim? (c) Intuitively, why does the swim take longer when there is a current?

51. A river flows with a steady speed v . A student swims upstream a distance d and then back to the starting point. The student can swim at speed c in still water. (a) In terms of d , v , and c , what time interval is required for the round trip? (b) What time interval would be required if the water were still? (c) Which time interval is larger? Explain whether it is always larger.

52. A Coast Guard cutter detects an unidentified ship at a distance of 20.0 km in the direction 15.0° east of north. The ship is traveling at 26.0 km/h on a course at 40.0° east of north. The Coast Guard wishes to send a speedboat to intercept and investigate the vessel. If the speedboat travels at 50.0 km/h , in what direction should it head? Express the direction as a compass bearing with respect to due north.

53. A science student is riding on a flatcar of a train traveling along a straight, horizontal track at a constant speed of 10.0 m/s . The student throws a ball into the air along a path that he judges to make an initial angle of 60.0° with the horizontal and to be in line with the track. The student's professor, who is standing on the ground nearby, observes the ball to rise vertically. How high does she see the ball rise?

54. A farm truck moves due east with a constant velocity of 9.50 m/s on a limitless, horizontal stretch of road. A boy riding on the back of the truck throws a can of soda upward (Fig. P4.54) and catches the projectile at the same location on the truck bed, but 16.0 m farther down the road. (a) In the frame of reference of the truck, at what angle to the vertical does the boy throw the can? (b) What is the initial speed of the can relative to the truck? (c) What is the shape of the can's trajectory as seen by the boy? An observer on the ground watches the boy throw the

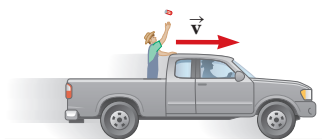


Figure P4.54

can and catch it. In this observer's frame of reference, (d) describe the shape of the can's path and (e) determine the initial velocity of the can.

Additional Problems

55. A ball on the end of a string is whirled around in a horizontal circle of radius 0.300 m . The plane of the circle is 1.20 m above the ground. The string breaks and the ball lands 2.00 m (horizontally) away from the point on the ground directly beneath the ball's location when the string breaks. Find the radial acceleration of the ball during its circular motion.

56. A ball is thrown with an initial speed v_i at an angle θ_i with the horizontal. The horizontal range of the ball is R , and the ball reaches a maximum height $R/6$. In terms of R and g , find (a) the time interval during which the ball is in motion, (b) the ball's speed at the peak of its path, (c) the initial vertical component of its velocity, (d) its initial speed, and (e) the angle θ_i . (f) Suppose the ball is thrown at the same initial speed found in (d) but at the angle appropriate for reaching the greatest height that it can. Find this height. (g) Suppose the ball is thrown at the same initial speed but at the angle for greatest possible range. Find this maximum horizontal range.

57. Why is the following situation impossible? A normally proportioned adult walks briskly along a straight line in the $+x$ direction, standing straight up and holding his right arm vertical and next to his body so that the arm does not swing. His right hand holds a ball at his side a distance h above the floor. When the ball passes above a point marked as $x = 0$ on the horizontal floor, he opens his fingers to release the ball from rest relative to his hand. The ball strikes the ground for the first time at position $x = 7.00h$.

58. A particle starts from the origin with velocity $5\hat{i} \text{ m/s}$ at $t = 0$ and moves in the xy plane with a varying acceleration given by $\vec{a} = (6\sqrt{t})\hat{j}$, where \vec{a} is in meters per second squared and t is in seconds. (a) Determine the velocity of the particle as a function of time. (b) Determine the position of the particle as a function of time.

59. The "Vomit Comet." In microgravity astronaut training and equipment testing, NASA flies a KC135A aircraft along a parabolic flight path. As shown in Figure P4.59, the aircraft climbs from $24\,000 \text{ ft}$ to $31\,000 \text{ ft}$, where

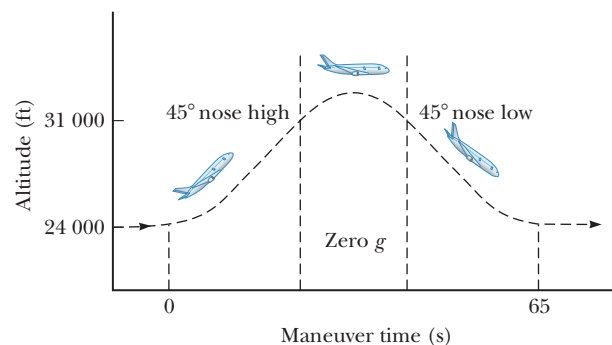


Figure P4.59

it enters a parabolic path with a velocity of 143 m/s nose high at 45.0° and exits with velocity 143 m/s at 45.0° nose low. During this portion of the flight, the aircraft and objects inside its padded cabin are in free fall; astronauts and equipment float freely as if there were no gravity. What are the aircraft's (a) speed and (b) altitude at the top of the maneuver? (c) What is the time interval spent in microgravity?

60. A basketball player is standing on the floor 10.0 m from the basket as in Figure P4.60. The height of the basket is 3.05 m, and he shoots the ball at a 40.0° angle with the horizontal from a height of 2.00 m. (a) What is the acceleration of the basketball at the highest point in its trajectory? (b) At what speed must the player throw the basketball so that the ball goes through the hoop without striking the backboard?

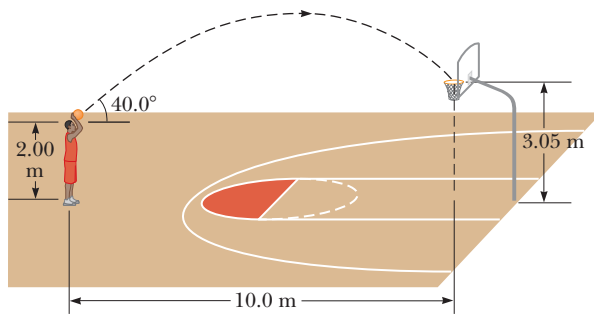


Figure P4.60

61. Lisa in her Lamborghini accelerates at the rate of $(3.00\hat{i} - 2.00\hat{j}) \text{ m/s}^2$, while Jill in her Jaguar accelerates at $(1.00\hat{i} + 3.00\hat{j}) \text{ m/s}^2$. They both start from rest at the origin of an xy coordinate system. After 5.00 s, (a) what is Lisa's speed with respect to Jill, (b) how far apart are they, and (c) what is Lisa's acceleration relative to Jill?
62. A boy throws a stone horizontally from the top of a cliff of height h toward the ocean below. The stone strikes the ocean at distance d from the base of the cliff. In terms of h , d , and g , find expressions for (a) the time t at which the stone lands in the ocean, (b) the initial speed of the stone, (c) the speed of the stone immediately before it reaches the ocean, and (d) the direction of the stone's velocity immediately before it reaches the ocean.
63. A flea is at point \textcircled{A} on a horizontal turntable, 10.0 cm from the center. The turntable is rotating at 33.3 rev/min in the clockwise direction. The flea jumps straight up to a height of 5.00 cm. At takeoff, it gives itself no horizontal velocity relative to the turntable. The flea lands on the turntable at point \textcircled{B} . Choose the origin of coordinates to be at the center of the turntable and the positive x axis passing through \textcircled{A} at the moment of takeoff. Then the original position of the flea is $10.0\hat{i}$ cm. (a) Find the position of point \textcircled{A} when the flea lands. (b) Find the position of point \textcircled{B} when the flea lands.

64. **M** Towns A and B in Figure P4.64 are 80.0 km apart. A couple arranges to drive from town A and meet a couple driving from town B at the lake, L. The two couples

leave simultaneously and drive for 2.50 h in the directions shown. Car 1 has a speed of 90.0 km/h. If the cars arrive simultaneously at the lake, what is the speed of car 2?

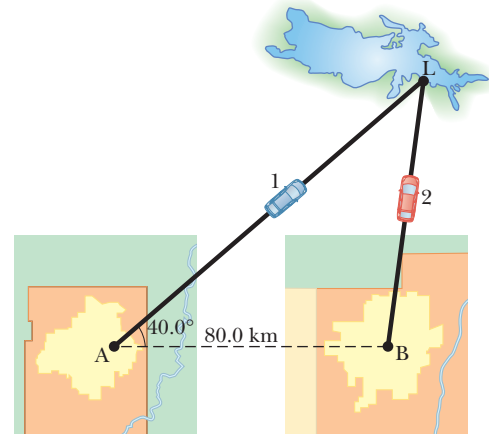


Figure P4.64

65. A catapult launches a rocket at an angle of 53.0° above the horizontal with an initial speed of 100 m/s. The rocket engine immediately starts a burn, and for 3.00 s the rocket moves along its initial line of motion with an acceleration of 30.0 m/s^2 . Then its engine fails, and the rocket proceeds to move in free fall. Find (a) the maximum altitude reached by the rocket, (b) its total time of flight, and (c) its horizontal range.
66. A cannon with a muzzle speed of 1 000 m/s is used to start an avalanche on a mountain slope. The target is 2 000 m from the cannon horizontally and 800 m above the cannon. At what angle, above the horizontal, should the cannon be fired?
67. **Why is the following situation impossible?** Albert Pujols hits a home run so that the baseball just clears the top row of bleachers, 24.0 m high, located 130 m from home plate. The ball is hit at 41.7 m/s at an angle of 35.0° to the horizontal, and air resistance is negligible.
68. As some molten metal splashes, one droplet flies off to the east with initial velocity v_i at angle θ_i above the horizontal, and another droplet flies off to the west with the same speed at the same angle above the horizontal as shown in Figure P4.68. In terms of v_i and θ_i , find the distance between the two droplets as a function of time.

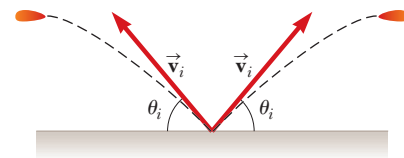


Figure P4.68

69. An astronaut on the surface of the Moon fires a cannon to launch an experiment package, which leaves the barrel moving horizontally. Assume the free-fall acceleration on the Moon is one-sixth of that on the

Earth. (a) What must the muzzle speed of the package be so that it travels completely around the Moon and returns to its original location? (b) What time interval does this trip around the Moon require?

70. A pendulum with a cord of length $r = 1.00$ m swings in a vertical plane (Fig. P4.70). When the pendulum is in the two horizontal positions $\theta = 90.0^\circ$ and $\theta = 270^\circ$, its speed is 5.00 m/s. Find the magnitude of (a) the radial acceleration and (b) the tangential acceleration for these positions. (c) Draw vector diagrams to determine the direction of the total acceleration for these two positions. (d) Calculate the magnitude and direction of the total acceleration at these two positions.

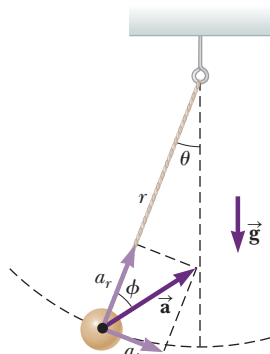


Figure P4.70

71. **M** A hawk is flying horizontally at 10.0 m/s in a straight line, 200 m above the ground. A mouse it has been carrying struggles free from its talons. The hawk continues on its path at the same speed for 2.00 s before attempting to retrieve its prey. To accomplish the retrieval, it dives in a straight line at constant speed and recaptures the mouse 3.00 m above the ground. (a) Assuming no air resistance acts on the mouse, find the diving speed of the hawk. (b) What angle did the hawk make with the horizontal during its descent? (c) For what time interval did the mouse experience free fall?

72. A projectile is launched from the point $(x = 0, y = 0)$, with velocity $(12.0\hat{i} + 49.0\hat{j})$ m/s, at $t = 0$. (a) Make a table listing the projectile's distance $|\vec{r}|$ from the origin at the end of each second thereafter, for $0 \leq t \leq 10$ s. Tabulating the x and y coordinates and the components of velocity v_x and v_y will also be useful. (b) Notice that the projectile's distance from its starting point increases with time, goes through a maximum, and starts to decrease. Prove that the distance is a maximum when the position vector is perpendicular to the velocity. *Suggestion:* Argue that if \vec{v} is not perpendicular to \vec{r} , then $|\vec{r}|$ must be increasing or decreasing. (c) Determine the magnitude of the maximum displacement. (d) Explain your method for solving part (c).

73. A spring cannon is located at the edge of a table that is 1.20 m above the floor. A steel ball is launched from the cannon with speed v_i at 35.0° above the horizontal. (a) Find the horizontal position of the ball as a function of v_i at the instant it lands on the floor. We write this function as $x(v_i)$. Evaluate x for (b) $v_i = 0.100$ m/s and for (c) $v_i = 100$ m/s. (d) Assume v_i is close to but not equal to zero. Show that one term in the answer to part (a) dominates so that the function $x(v_i)$ reduces to a simpler form. (e) If v_i is very large, what is the approximate form of $x(v_i)$? (f) Describe the overall shape of the graph of the function $x(v_i)$.

74. An outfielder throws a baseball to his catcher in an attempt to throw out a runner at home plate. The ball bounces once before reaching the catcher. Assume the angle at which the bounced ball leaves the ground is the same as the angle at which the outfielder threw it as shown in Figure P4.74, but that the ball's speed after the bounce is one-half of what it was before the bounce. (a) Assume the ball is always thrown with the same initial speed and ignore air resistance. At what angle θ should the fielder throw the ball to make it go the same distance D with one bounce (blue path) as a ball thrown upward at 45.0° with no bounce (green path)? (b) Determine the ratio of the time interval for the one-bounce throw to the flight time for the no-bounce throw.

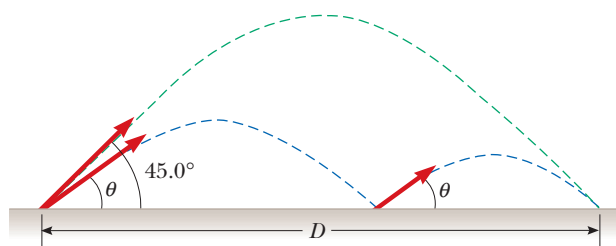


Figure P4.74

75. A World War II bomber flies horizontally over level terrain with a speed of 275 m/s relative to the ground and at an altitude of 3.00 km. The bombardier releases one bomb. (a) How far does the bomb travel horizontally between its release and its impact on the ground? Ignore the effects of air resistance. (b) The pilot maintains the plane's original course, altitude, and speed through a storm of flak. Where is the plane when the bomb hits the ground? (c) The bomb hits the target seen in the telescopic bombsight at the moment of the bomb's release. At what angle from the vertical was the bombsight set?
76. A truck loaded with cannonball watermelons stops suddenly to avoid running over the edge of a washed-out bridge (Fig. P4.76). The quick stop causes a number of melons to fly off the truck. One melon leaves the hood of the truck with an initial speed $v_i = 10.0$ m/s in the horizontal direction. A cross section of the bank has the shape of the bottom half of a parabola, with its vertex at the initial location of the projected watermelon and with the equation $y^2 = 16x$, where x and y are mea-

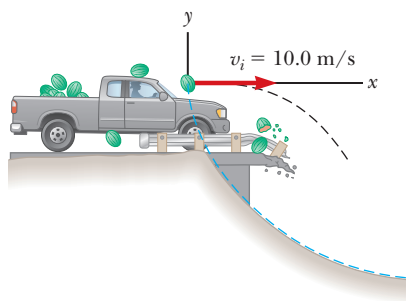


Figure P4.76 The blue dashed curve shows the parabolic shape of the bank.

sured in meters. What are the x and y coordinates of the melon when it splatters on the bank?

- 77.** A car is parked on a steep incline, making an angle of 37.0° below the horizontal and overlooking the ocean, when its brakes fail and it begins to roll. Starting from rest at $t = 0$, the car rolls down the incline with a constant acceleration of 4.00 m/s^2 , traveling 50.0 m to the edge of a vertical cliff. The cliff is 30.0 m above the ocean. Find (a) the speed of the car when it reaches the edge of the cliff, (b) the time interval elapsed when it arrives there, (c) the velocity of the car when it lands in the ocean, (d) the total time interval the car is in motion, and (e) the position of the car when it lands in the ocean, relative to the base of the cliff.

- 78.** An aging coyote cannot run fast enough to catch a roadrunner. He purchases on eBay a set of jet-powered roller skates, which provide a constant horizontal acceleration of 15.0 m/s^2 (Fig. P4.78). The coyote starts at rest 70.0 m from the edge of a cliff at the instant the roadrunner zips past in the direction of the cliff. (a) Determine the minimum constant speed the roadrunner must have to reach the cliff before the coyote. At the edge of the cliff, the roadrunner escapes by making a sudden turn, while the coyote continues straight ahead. The coyote's skates remain horizontal and continue to operate while he is in flight, so his acceleration while in the air is $(15.0\hat{i} - 9.80\hat{j}) \text{ m/s}^2$. (b) The cliff is 100 m above the flat floor of the desert. Determine how far from the base of the vertical cliff the coyote lands. (c) Determine the components of the coyote's impact velocity.




Figure P4.78

- 79.** A fisherman sets out upstream on a river. His small boat, powered by an outboard motor, travels at a constant speed v in still water. The water flows at a lower constant speed v_w . The fisherman has traveled upstream for 2.00 km when his ice chest falls out of the boat. He notices that the chest is missing only after he has gone upstream for another 15.0 min . At that point, he turns around and heads back downstream, all the time traveling at the same speed relative to the water. He catches up with the floating ice chest just as he returns to his starting point. How fast is the river flowing? Solve this problem in two ways. (a) First, use the Earth as a reference frame. With respect to the Earth, the boat travels upstream at speed $v - v_w$ and downstream at $v + v_w$. (b) A second much simpler and more elegant solution is obtained by using the water as the reference frame. This approach has important applications in many more complicated problems; examples are calculating the motion of rockets and satellites and analyzing the scattering of subatomic particles from massive targets.
- 80.** Do not hurt yourself; do not strike your hand against anything. Within these limitations, describe what you do to give your hand a large acceleration. Compute an

order-of-magnitude estimate of this acceleration, stating the quantities you measure or estimate and their values.

Challenge Problems

- 81.** A skier leaves the ramp of a ski jump with a velocity of $v = 10.0 \text{ m/s}$ at $\theta = 15.0^\circ$ above the horizontal as shown in Figure P4.81. The slope where she will land is inclined downward at $\phi = 50.0^\circ$, and air resistance is negligible. Find (a) the distance from the end of the ramp to where the jumper lands and (b) her velocity components just before the landing. (c) Explain how you think the results might be affected if air resistance were included.

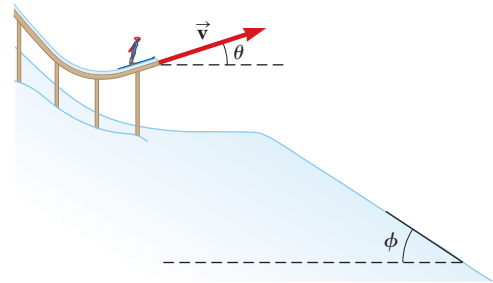


Figure P4.81

- 82.** Two swimmers, Chris and Sarah, start together at the same point on the bank of a wide stream that flows with a speed v . Both move at the same speed c (where $c > v$) relative to the water. Chris swims downstream a distance L and then upstream the same distance. Sarah swims so that her motion relative to the Earth is perpendicular to the banks of the stream. She swims the distance L and then back the same distance, with both swimmers returning to the starting point. In terms of L , c , and v , find the time intervals required (a) for Chris's round trip and (b) for Sarah's round trip. (c) Explain which swimmer returns first.
- 83.** The water in a river flows uniformly at a constant speed of 2.50 m/s between parallel banks 80.0 m apart. You are to deliver a package across the river, but you can swim only at 1.50 m/s . (a) If you choose to minimize the time you spend in the water, in what direction should you head? (b) How far downstream will you be carried? (c) If you choose to minimize the distance downstream that the river carries you, in what direction should you head? (d) How far downstream will you be carried?
- 84.** A person standing at the top of a hemispherical rock of radius R kicks a ball (initially at rest on the top of the rock) to give it horizontal velocity \vec{v}_i as shown in Figure P4.84. (a) What must be its minimum initial speed

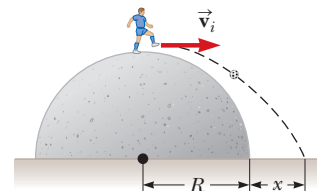


Figure P4.84

if the ball is never to hit the rock after it is kicked?
 (b) With this initial speed, how far from the base of the rock does the ball hit the ground?

85. A dive-bomber has a velocity of 280 m/s at an angle θ below the horizontal. When the altitude of the aircraft is 2.15 km, it releases a bomb, which subsequently hits a target on the ground. The magnitude of the displacement from the point of release of the bomb to the target is 3.25 km. Find the angle θ .
86. A projectile is fired up an incline (incline angle ϕ) with an initial speed v_i at an angle θ_i with respect to the horizontal ($\theta_i > \phi$) as shown in Figure P4.86. (a) Show that the projectile travels a distance d up the incline, where

$$d = \frac{2v_i^2 \cos\theta_i \sin(\theta_i - \phi)}{g \cos^2 \phi}$$

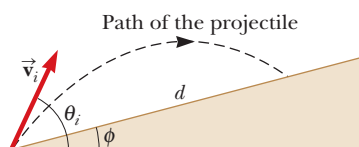


Figure P4.86

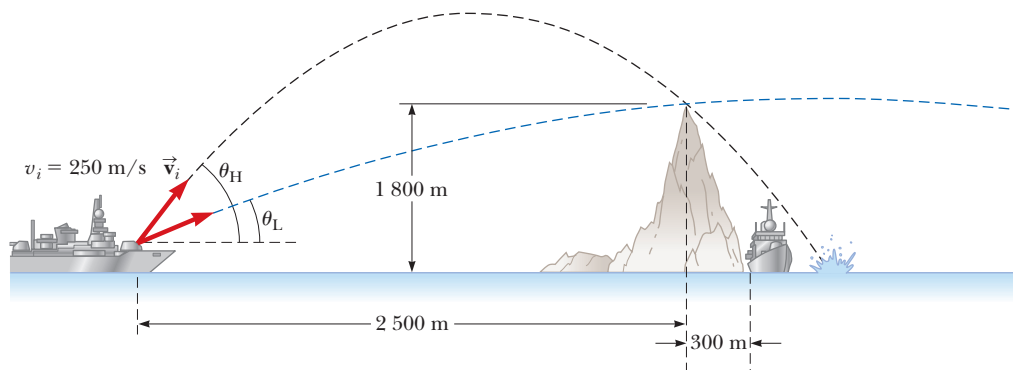


Figure P4.89

(b) For what value of θ_i is d a maximum, and what is that maximum value?

87. A fireworks rocket explodes at height h , the peak of its vertical trajectory. It throws out burning fragments in all directions, but all at the same speed v . Pellets of solidified metal fall to the ground without air resistance. Find the smallest angle that the final velocity of an impacting fragment makes with the horizontal.
88. In the What If? section of Example 4.5, it was claimed that the maximum range of a ski jumper occurs for a launch angle θ given by

$$\theta = 45^\circ - \frac{\phi}{2}$$

where ϕ is the angle the hill makes with the horizontal in Figure 4.14. Prove this claim by deriving the equation above.

89. An enemy ship is on the east side of a mountain island as shown in Figure P4.89. The enemy ship has maneuvered to within 2500 m of the 1800-m-high mountain peak and can shoot projectiles with an initial speed of 250 m/s. If the western shoreline is horizontally 300 m from the peak, what are the distances from the western shore at which a ship can be safe from the bombardment of the enemy ship?

The Laws of Motion

CHAPTER

5



- 5.1 The Concept of Force
- 5.2 Newton's First Law and Inertial Frames
- 5.3 Mass
- 5.4 Newton's Second Law
- 5.5 The Gravitational Force and Weight
- 5.6 Newton's Third Law
- 5.7 Analysis Models Using Newton's Second Law
- 5.8 Forces of Friction

In Chapters 2 and 4, we *described* the motion of an object in terms of its position, velocity, and acceleration without considering what might *influence* that motion. Now we consider that influence: Why does the motion of an object change? What might cause one object to remain at rest and another object to accelerate? Why is it generally easier to move a small object than a large object? The two main factors we need to consider are the *forces* acting on an object and the *mass* of the object. In this chapter, we begin our study of *dynamics* by discussing the three basic laws of motion, which deal with forces and masses and were formulated more than three centuries ago by Isaac Newton.

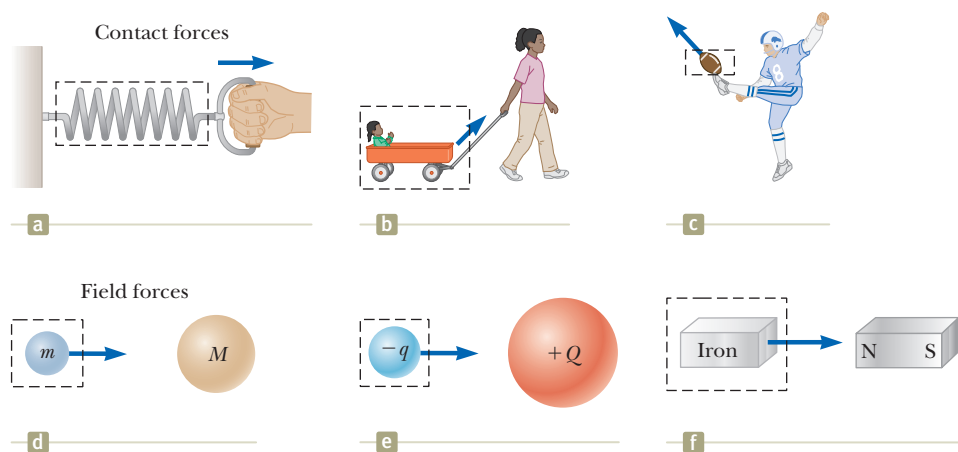
A person sculls on a calm waterway. The water exerts forces on the oars to accelerate the boat. (Tetra Images/Getty Images)

5.1 The Concept of Force

Everyone has a basic understanding of the concept of force from everyday experience. When you push your empty dinner plate away, you exert a force on it. Similarly, you exert a force on a ball when you throw or kick it. In these examples, the word *force* refers to an interaction with an object by means of muscular activity and some change in the object's velocity. Forces do not always cause motion, however. For example, when you are sitting, a gravitational force acts on your body and yet you remain stationary. As a second example, you can push (in other words, exert a force) on a large boulder and not be able to move it.

What force (if any) causes the Moon to orbit the Earth? Newton answered this and related questions by stating that forces are what cause any change in the velocity of an object. The Moon's velocity changes in direction as it moves in a nearly circular

Figure 5.1 Some examples of applied forces. In each case, a force is exerted on the object within the boxed area. Some agent in the environment external to the boxed area exerts a force on the object.



orbit around the Earth. This change in velocity is caused by the gravitational force exerted by the Earth on the Moon.

When a coiled spring is pulled, as in Figure 5.1a, the spring stretches. When a stationary cart is pulled, as in Figure 5.1b, the cart moves. When a football is kicked, as in Figure 5.1c, it is both deformed and set in motion. These situations are all examples of a class of forces called *contact forces*. That is, they involve physical contact between two objects. Other examples of contact forces are the force exerted by gas molecules on the walls of a container and the force exerted by your feet on the floor.

Another class of forces, known as *field forces*, does not involve physical contact between two objects. These forces act through empty space. The gravitational force of attraction between two objects with mass, illustrated in Figure 5.1d, is an example of this class of force. The gravitational force keeps objects bound to the Earth and the planets in orbit around the Sun. Another common field force is the electric force that one electric charge exerts on another (Fig. 5.1e), such as the attractive electric force between an electron and a proton that form a hydrogen atom. A third example of a field force is the force a bar magnet exerts on a piece of iron (Fig. 5.1f).

The distinction between contact forces and field forces is not as sharp as you may have been led to believe by the previous discussion. When examined at the atomic level, all the forces we classify as contact forces turn out to be caused by electric (field) forces of the type illustrated in Figure 5.1e. Nevertheless, in developing models for macroscopic phenomena, it is convenient to use both classifications of forces. The only known *fundamental forces* in nature are all field forces: (1) *gravitational forces* between objects, (2) *electromagnetic forces* between electric charges, (3) *strong forces* between subatomic particles, and (4) *weak forces* that arise in certain radioactive decay processes. In classical physics, we are concerned only with gravitational and electromagnetic forces. We will discuss strong and weak forces in Chapter 46.



Bridgeman-Giraudon/Art Resource, NY

Isaac Newton

English physicist and mathematician (1642–1727)

Isaac Newton was one of the most brilliant scientists in history. Before the age of 30, he formulated the basic concepts and laws of mechanics, discovered the law of universal gravitation, and invented the mathematical methods of calculus. As a consequence of his theories, Newton was able to explain the motions of the planets, the ebb and flow of the tides, and many special features of the motions of the Moon and the Earth. He also interpreted many fundamental observations concerning the nature of light. His contributions to physical theories dominated scientific thought for two centuries and remain important today.

The Vector Nature of Force

It is possible to use the deformation of a spring to measure force. Suppose a vertical force is applied to a spring scale that has a fixed upper end as shown in Figure 5.2a. The spring elongates when the force is applied, and a pointer on the scale reads the extension of the spring. We can calibrate the spring by defining a reference force \vec{F}_1 as the force that produces a pointer reading of 1.00 cm. If we now apply a different downward force \vec{F}_2 whose magnitude is twice that of the reference force \vec{F}_1 as seen in Figure 5.2b, the pointer moves to 2.00 cm. Figure 5.2c shows that the combined effect of the two collinear forces is the sum of the effects of the individual forces.

Now suppose the two forces are applied simultaneously with \vec{F}_1 downward and \vec{F}_2 horizontal as illustrated in Figure 5.2d. In this case, the pointer reads 2.24 cm. The single force \vec{F} that would produce this same reading is the sum of the two vectors \vec{F}_1 and \vec{F}_2 as described in Figure 5.2d. That is, $|\vec{F}| = \sqrt{F_1^2 + F_2^2} = 2.24$ units,

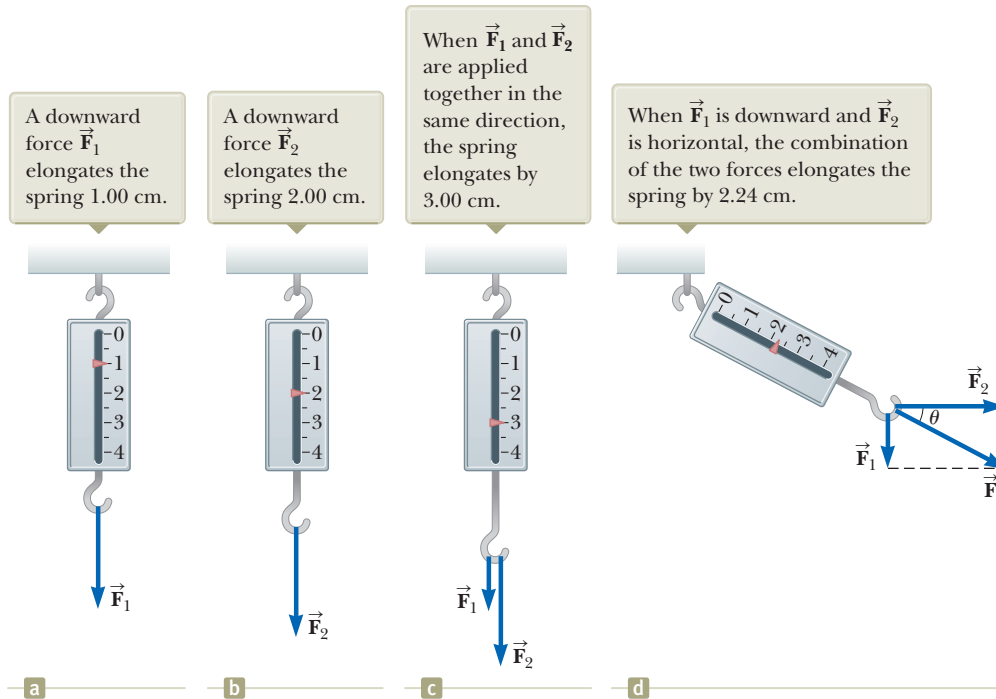


Figure 5.2 The vector nature of a force is tested with a spring scale.

and its direction is $\theta = \tan^{-1}(-0.500) = -26.6^\circ$. Because forces have been experimentally verified to behave as vectors, you *must* use the rules of vector addition to obtain the net force on an object.

5.2 Newton's First Law and Inertial Frames

We begin our study of forces by imagining some physical situations involving a puck on a perfectly level air hockey table (Fig. 5.3). You expect that the puck will remain stationary when it is placed gently at rest on the table. Now imagine your air hockey table is located on a train moving with constant velocity along a perfectly smooth track. If the puck is placed on the table, the puck again remains where it is placed. If the train were to accelerate, however, the puck would start moving along the table opposite the direction of the train's acceleration, just as a set of papers on your dashboard falls onto the floor of your car when you step on the accelerator.

As we saw in Section 4.6, a moving object can be observed from any number of reference frames. **Newton's first law of motion**, sometimes called the *law of inertia*, defines a special set of reference frames called *inertial frames*. This law can be stated as follows:

If an object does not interact with other objects, it is possible to identify a reference frame in which the object has zero acceleration.

Such a reference frame is called an **inertial frame of reference**. When the puck is on the air hockey table located on the ground, you are observing it from an inertial reference frame; there are no horizontal interactions of the puck with any other objects, and you observe it to have zero acceleration in that direction. When you are on the train moving at constant velocity, you are also observing the puck from an inertial reference frame. Any reference frame that moves with constant velocity relative to an inertial frame is itself an inertial frame. When you and the train accelerate, however, you are observing the puck from a **noninertial reference frame** because the train is accelerating relative to the inertial reference frame of the Earth's surface. While the puck appears to be accelerating according to your observations, a reference frame can be identified in which the puck has zero acceleration.

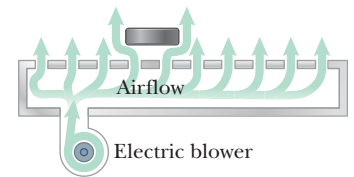


Figure 5.3 On an air hockey table, air blown through holes in the surface allows the puck to move almost without friction. If the table is not accelerating, a puck placed on the table will remain at rest.

◀ **Newton's first law**

◀ **Inertial frame of reference**

For example, an observer standing outside the train on the ground sees the puck sliding relative to the table but always moving with the same velocity with respect to the ground as the train had before it started to accelerate (because there is almost no friction to “tie” the puck and the train together). Therefore, Newton’s first law is still satisfied even though your observations as a rider on the train show an apparent acceleration relative to you.

A reference frame that moves with constant velocity relative to the distant stars is the best approximation of an inertial frame, and for our purposes we can consider the Earth as being such a frame. The Earth is not really an inertial frame because of its orbital motion around the Sun and its rotational motion about its own axis, both of which involve centripetal accelerations. These accelerations are small compared with g , however, and can often be neglected. For this reason, we model the Earth as an inertial frame, along with any other frame attached to it.

Let us assume we are observing an object from an inertial reference frame. (We will return to observations made in noninertial reference frames in Section 6.3.) Before about 1600, scientists believed that the natural state of matter was the state of rest. Observations showed that moving objects eventually stopped moving. Galileo was the first to take a different approach to motion and the natural state of matter. He devised thought experiments and concluded that it is not the nature of an object to stop once set in motion: rather, it is its nature to *resist changes in its motion*. In his words, “Any velocity once imparted to a moving body will be rigidly maintained as long as the external causes of retardation are removed.” For example, a spacecraft drifting through empty space with its engine turned off will keep moving forever. It would *not* seek a “natural state” of rest.

Given our discussion of observations made from inertial reference frames, we can pose a more practical statement of Newton’s first law of motion:

In the absence of external forces and when viewed from an inertial reference frame, an object at rest remains at rest and an object in motion continues in motion with a constant velocity (that is, with a constant speed in a straight line).

In other words, **when no force acts on an object, the acceleration of the object is zero.** From the first law, we conclude that any *isolated object* (one that does not interact with its environment) is either at rest or moving with constant velocity. The tendency of an object to resist any attempt to change its velocity is called **inertia**. Given the statement of the first law above, we can conclude that an object that is accelerating must be experiencing a force. In turn, from the first law, we can define **force** as **that which causes a change in motion of an object.**

Quick Quiz 5.1 Which of the following statements is correct? (a) It is possible for an object to have motion in the absence of forces on the object. (b) It is possible to have forces on an object in the absence of motion of the object. (c) Neither statement (a) nor statement (b) is correct. (d) Both statements (a) and (b) are correct.

5.3 Mass

Imagine playing catch with either a basketball or a bowling ball. Which ball is more likely to keep moving when you try to catch it? Which ball requires more effort to throw it? The bowling ball requires more effort. In the language of physics, we say that the bowling ball is more resistant to changes in its velocity than the basketball. How can we quantify this concept?

Mass is that property of an object that specifies how much resistance an object exhibits to changes in its velocity, and as we learned in Section 1.1, the SI unit of mass is the kilogram. Experiments show that the greater the mass of an object, the less that object accelerates under the action of a given applied force.

To describe mass quantitatively, we conduct experiments in which we compare the accelerations a given force produces on different objects. Suppose a force act-

Pitfall Prevention 5.1

Newton’s First Law Newton’s first law does *not* say what happens for an object with *zero net force*, that is, multiple forces that cancel; it says what happens *in the absence of external forces*. This subtle but important difference allows us to define force as that which causes a change in the motion. The description of an object under the effect of forces that balance is covered by Newton’s second law.

Another statement of Newton’s first law

Definition of force

Pitfall Prevention 5.2

Force Is the Cause of Changes in Motion An object can have motion in the absence of forces as described in Newton’s first law. Therefore, don’t interpret force as the cause of *motion*. Force is the cause of *changes in motion*.

Definition of mass

ing on an object of mass m_1 produces a change in motion of the object that we can quantify with the object's acceleration \vec{a}_1 , and the *same force* acting on an object of mass m_2 produces an acceleration \vec{a}_2 . The ratio of the two masses is defined as the *inverse* ratio of the magnitudes of the accelerations produced by the force:

$$\frac{m_1}{m_2} \equiv \frac{a_2}{a_1} \quad (5.1)$$

For example, if a given force acting on a 3-kg object produces an acceleration of 4 m/s^2 , the same force applied to a 6-kg object produces an acceleration of 2 m/s^2 . According to a huge number of similar observations, we conclude that the magnitude of the acceleration of an object is inversely proportional to its mass when acted on by a given force. If one object has a known mass, the mass of the other object can be obtained from acceleration measurements.

Mass is an inherent property of an object and is independent of the object's surroundings and of the method used to measure it. Also, mass is a scalar quantity and thus obeys the rules of ordinary arithmetic. For example, if you combine a 3-kg mass with a 5-kg mass, the total mass is 8 kg. This result can be verified experimentally by comparing the acceleration that a known force gives to several objects separately with the acceleration that the same force gives to the same objects combined as one unit.

Mass should not be confused with weight. Mass and weight are two different quantities. The weight of an object is equal to the magnitude of the gravitational force exerted on the object and varies with location (see Section 5.5). For example, a person weighing 180 lb on the Earth weighs only about 30 lb on the Moon. On the other hand, the mass of an object is the same everywhere: an object having a mass of 2 kg on the Earth also has a mass of 2 kg on the Moon.

◀ Mass and weight are different quantities

5.4 Newton's Second Law

Newton's first law explains what happens to an object when no forces act on it: it maintains its original motion; it either remains at rest or moves in a straight line with constant speed. Newton's second law answers the question of what happens to an object when one or more forces act on it.

Imagine performing an experiment in which you push a block of mass m across a frictionless, horizontal surface. When you exert some horizontal force \vec{F} on the block, it moves with some acceleration \vec{a} . If you apply a force twice as great on the same block, experimental results show that the acceleration of the block doubles; if you increase the applied force to $3\vec{F}$, the acceleration triples; and so on. From such observations, we conclude that the acceleration of an object is directly proportional to the force acting on it: $\vec{F} \propto \vec{a}$. This idea was first introduced in Section 2.4 when we discussed the direction of the acceleration of an object. We also know from the preceding section that the magnitude of the acceleration of an object is inversely proportional to its mass: $|\vec{a}| \propto 1/m$.

These experimental observations are summarized in **Newton's second law**:

When viewed from an inertial reference frame, the acceleration of an object is directly proportional to the net force acting on it and inversely proportional to its mass:

$$\vec{a} \propto \frac{\sum \vec{F}}{m}$$

If we choose a proportionality constant of 1, we can relate mass, acceleration, and force through the following mathematical statement of Newton's second law:¹

$$\sum \vec{F} = m\vec{a} \quad (5.2)$$

Pitfall Prevention 5.3

$m\vec{a}$ Is Not a Force Equation 5.2 does *not* say that the product $m\vec{a}$ is a force. All forces on an object are added vectorially to generate the net force on the left side of the equation. This net force is then equated to the product of the mass of the object and the acceleration that results from the net force. Do *not* include an " $m\vec{a}$ force" in your analysis of the forces on an object.

◀ Newton's second law

¹Equation 5.2 is valid only when the speed of the object is much less than the speed of light. We treat the relativistic situation in Chapter 39.

In both the textual and mathematical statements of Newton's second law, we have indicated that the acceleration is due to the *net force* $\Sigma \vec{F}$ acting on an object. The **net force** on an object is the vector sum of all forces acting on the object. (We sometimes refer to the net force as the *total force*, the *resultant force*, or the *unbalanced force*.) In solving a problem using Newton's second law, it is imperative to determine the correct net force on an object. Many forces may be acting on an object, but there is only one acceleration.

Equation 5.2 is a vector expression and hence is equivalent to three component equations:

Newton's second law: **component form**

$$\Sigma F_x = ma_x \quad \Sigma F_y = ma_y \quad \Sigma F_z = ma_z \quad (5.3)$$

Quick Quiz 5.2 An object experiences no acceleration. Which of the following *cannot* be true for the object? (a) A single force acts on the object. (b) No forces act on the object. (c) Forces act on the object, but the forces cancel.

Quick Quiz 5.3 You push an object, initially at rest, across a frictionless floor with a constant force for a time interval Δt , resulting in a final speed of v for the object. You then repeat the experiment, but with a force that is twice as large. What time interval is now required to reach the same final speed v ?
 (a) $4 \Delta t$ (b) $2 \Delta t$ (c) Δt (d) $\Delta t/2$ (e) $\Delta t/4$

The SI unit of force is the **newton** (N). A force of 1 N is the force that, when acting on an object of mass 1 kg, produces an acceleration of 1 m/s^2 . From this definition and Newton's second law, we see that the newton can be expressed in terms of the following fundamental units of mass, length, and time:

Definition of the newton

$$1 \text{ N} \equiv 1 \text{ kg} \cdot \text{m/s}^2 \quad (5.4)$$

In the U.S. customary system, the unit of force is the **pound** (lb). A force of 1 lb is the force that, when acting on a 1-slug mass,² produces an acceleration of 1 ft/s^2 :

$$1 \text{ lb} \equiv 1 \text{ slug} \cdot \text{ft/s}^2$$

A convenient approximation is $1 \text{ N} \approx \frac{1}{4} \text{ lb}$.

Example 5.1 An Accelerating Hockey Puck AM

A hockey puck having a mass of 0.30 kg slides on the frictionless, horizontal surface of an ice rink. Two hockey sticks strike the puck simultaneously, exerting the forces on the puck shown in Figure 5.4. The force \vec{F}_1 has a magnitude of 5.0 N, and is directed at $\theta = 20^\circ$ below the x axis. The force \vec{F}_2 has a magnitude of 8.0 N and its direction is $\phi = 60^\circ$ above the x axis. Determine both the magnitude and the direction of the puck's acceleration.

SOLUTION

Conceptualize Study Figure 5.4. Using your expertise in vector addition from Chapter 3, predict the approximate direction of the net force vector on the puck. The acceleration of the puck will be in the same direction.

Categorize Because we can determine a net force and we want an acceleration, this problem is categorized as one that may be solved using Newton's second law. In Section 5.7, we will formally introduce the *particle under a net force* analysis model to describe a situation such as this one.

Analyze Find the component of the net force acting on the puck in the x direction:

$$\Sigma F_x = F_{1x} + F_{2x} = F_1 \cos \theta + F_2 \cos \phi$$

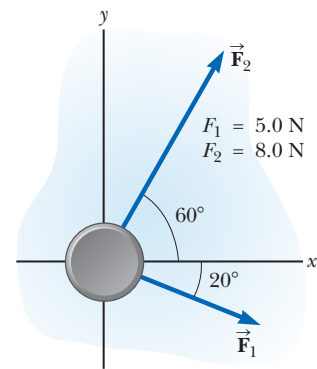


Figure 5.4 (Example 5.1) A hockey puck moving on a frictionless surface is subject to two forces \vec{F}_1 and \vec{F}_2 .

²The *slug* is the unit of mass in the U.S. customary system and is that system's counterpart of the SI unit the *kilogram*. Because most of the calculations in our study of classical mechanics are in SI units, the slug is seldom used in this text.

► 5.1 continued

Find the component of the net force acting on the puck in the y direction:

Use Newton's second law in component form (Eq. 5.3) to find the x and y components of the puck's acceleration:

Substitute numerical values:

Find the magnitude of the acceleration:

Find the direction of the acceleration relative to the positive x axis:

$$\sum F_y = F_{1y} + F_{2y} = F_1 \sin \theta + F_2 \sin \phi$$

$$a_x = \frac{\sum F_x}{m} = \frac{F_1 \cos \theta + F_2 \cos \phi}{m}$$

$$a_y = \frac{\sum F_y}{m} = \frac{F_1 \sin \theta + F_2 \sin \phi}{m}$$

$$a_x = \frac{(5.0 \text{ N}) \cos(-20^\circ) + (8.0 \text{ N}) \cos(60^\circ)}{0.30 \text{ kg}} = 29 \text{ m/s}^2$$

$$a_y = \frac{(5.0 \text{ N}) \sin(-20^\circ) + (8.0 \text{ N}) \sin(60^\circ)}{0.30 \text{ kg}} = 17 \text{ m/s}^2$$

$$a = \sqrt{(29 \text{ m/s}^2)^2 + (17 \text{ m/s}^2)^2} = 34 \text{ m/s}^2$$

$$\theta = \tan^{-1}\left(\frac{a_y}{a_x}\right) = \tan^{-1}\left(\frac{17}{29}\right) = 31^\circ$$

Finalize The vectors in Figure 5.4 can be added graphically to check the reasonableness of our answer. Because the acceleration vector is along the direction of the resultant force, a drawing showing the resultant force vector helps us check the validity of the answer. (Try it!)

WHAT IF? Suppose three hockey sticks strike the puck simultaneously, with two of them exerting the forces shown in Figure 5.4. The result of the three forces is that the hockey puck shows *no* acceleration. What must be the components of the third force?

Answer If there is zero acceleration, the net force acting on the puck must be zero. Therefore, the three forces must cancel. The components of the third force must be of equal magnitude and opposite sign compared to the components of the net force applied by the first two forces so that all the components add to zero. Therefore, $F_{3x} = -\sum F_x = -(0.30 \text{ kg})(29 \text{ m/s}^2) = -8.7 \text{ N}$ and $F_{3y} = -\sum F_y = -(0.30 \text{ kg})(17 \text{ m/s}^2) = -5.2 \text{ N}$.

5.5 The Gravitational Force and Weight

All objects are attracted to the Earth. The attractive force exerted by the Earth on an object is called the **gravitational force** \vec{F}_g . This force is directed toward the center of the Earth,³ and its magnitude is called the **weight** of the object.

We saw in Section 2.6 that a freely falling object experiences an acceleration \vec{g} acting toward the center of the Earth. Applying Newton's second law $\sum \vec{F} = m\vec{a}$ to a freely falling object of mass m , with $\vec{a} = \vec{g}$ and $\sum \vec{F} = \vec{F}_g$, gives

$$\vec{F}_g = m\vec{g} \quad (5.5)$$

Therefore, the weight of an object, being defined as the magnitude of \vec{F}_g , is given by

$$F_g = mg \quad (5.6)$$

Because it depends on g , weight varies with geographic location. Because g decreases with increasing distance from the center of the Earth, objects weigh less at higher altitudes than at sea level. For example, a 1 000-kg pallet of bricks used in the construction of the Empire State Building in New York City weighed 9 800 N at street level, but weighed about 1 N less by the time it was lifted from sidewalk level to the top of the building. As another example, suppose a student has a mass

Pitfall Prevention 5.4

"Weight of an Object" We are familiar with the everyday phrase, the "weight of an object." Weight, however, is not an inherent property of an object; rather, it is a measure of the gravitational force between the object and the Earth (or other planet). Therefore, weight is a property of a *system* of items: the object and the Earth.

Pitfall Prevention 5.5

Kilogram Is Not a Unit of Weight You may have seen the "conversion" $1 \text{ kg} = 2.2 \text{ lb}$. Despite popular statements of weights expressed in kilograms, the kilogram is not a unit of *weight*, it is a unit of *mass*. The conversion statement is not an equality; it is an *equivalence* that is valid only on the Earth's surface.

³This statement ignores that the mass distribution of the Earth is not perfectly spherical.



NASA/Eugene Cernan

The life-support unit strapped to the back of astronaut Harrison Schmitt weighed 300 lb on the Earth and had a mass of 136 kg. During his training, a 50-lb mock-up with a mass of 23 kg was used. Although this strategy effectively simulated the reduced weight the unit would have on the Moon, it did not correctly mimic the unchanging mass. It was more difficult to accelerate the 136-kg unit (perhaps by jumping or twisting suddenly) on the Moon than it was to accelerate the 23-kg unit on the Earth.

of 70.0 kg. The student's weight in a location where $g = 9.80 \text{ m/s}^2$ is 686 N (about 150 lb). At the top of a mountain, however, where $g = 9.77 \text{ m/s}^2$, the student's weight is only 684 N. Therefore, if you want to lose weight without going on a diet, climb a mountain or weigh yourself at 30 000 ft during an airplane flight!

Equation 5.6 quantifies the gravitational force on the object, but notice that this equation does not require the object to be moving. Even for a stationary object or for an object on which several forces act, Equation 5.6 can be used to calculate the magnitude of the gravitational force. The result is a subtle shift in the interpretation of m in the equation. The mass m in Equation 5.6 determines the strength of the gravitational attraction between the object and the Earth. This role is completely different from that previously described for mass, that of measuring the resistance to changes in motion in response to an external force. In that role, mass is also called **inertial mass**. We call m in Equation 5.6 the **gravitational mass**. Even though this quantity is different in behavior from inertial mass, it is one of the experimental conclusions in Newtonian dynamics that gravitational mass and inertial mass have the same value.

Although this discussion has focused on the gravitational force on an object due to the Earth, the concept is generally valid on any planet. The value of g will vary from one planet to the next, but the magnitude of the gravitational force will always be given by the value of mg .

- Quick Quiz 5.4** Suppose you are talking by interplanetary telephone to a friend who lives on the Moon. He tells you that he has just won a newton of gold in a contest. Excitedly, you tell him that you entered the Earth version of the same contest and also won a newton of gold! Who is richer? (a) You are. (b) Your friend is. (c) You are equally rich.

Conceptual Example 5.2

How Much Do You Weigh in an Elevator?

You have most likely been in an elevator that accelerates upward as it moves toward a higher floor. In this case, you feel heavier. In fact, if you are standing on a bathroom scale at the time, the scale measures a force having a magnitude that is greater than your weight. Therefore, you have tactile and measured evidence that leads you to believe you are heavier in this situation. *Are you heavier?*

SOLUTION

No; your weight is unchanged. Your experiences are due to your being in a noninertial reference frame. To provide the acceleration upward, the floor or scale must exert on your feet an upward force that is greater in magnitude than your weight. It is this greater force you feel, which you interpret as feeling heavier. The scale reads this upward force, not your weight, and so its reading increases.

5.6 Newton's Third Law

If you press against a corner of this textbook with your fingertip, the book pushes back and makes a small dent in your skin. If you push harder, the book does the same and the dent in your skin is a little larger. This simple activity illustrates that forces are *interactions* between two objects: when your finger pushes on the book, the book pushes back on your finger. This important principle is known as **Newton's third law**:

Newton's third law ►

If two objects interact, the force \vec{F}_{12} exerted by object 1 on object 2 is equal in magnitude and opposite in direction to the force \vec{F}_{21} exerted by object 2 on object 1:

$$\vec{F}_{12} = -\vec{F}_{21} \quad (5.7)$$

When it is important to designate forces as interactions between two objects, we will use this subscript notation, where \vec{F}_{ab} means “the force exerted by a on b.” The third law is illustrated in Figure 5.5. The force that object 1 exerts on object 2 is popularly called the *action force*, and the force of object 2 on object 1 is called the *reaction force*. These italicized terms are not scientific terms; furthermore, either force can be labeled the action or reaction force. We will use these terms for convenience. In all cases, the action and reaction forces act on *different* objects and must be of the same type (gravitational, electrical, etc.). For example, the force acting on a freely falling projectile is the gravitational force exerted by the Earth on the projectile $\vec{F}_g = \vec{F}_{Ep}$ (E = Earth, p = projectile), and the magnitude of this force is mg . The reaction to this force is the gravitational force exerted by the projectile on the Earth $\vec{F}_{pE} = -\vec{F}_{Ep}$. The reaction force \vec{F}_{pE} must accelerate the Earth toward the projectile just as the action force \vec{F}_{Ep} accelerates the projectile toward the Earth. Because the Earth has such a large mass, however, its acceleration due to this reaction force is negligibly small.

Consider a computer monitor at rest on a table as in Figure 5.6a. The gravitational force on the monitor is $\vec{F}_g = \vec{F}_{Em}$. The reaction to this force is the force $\vec{F}_{mE} = -\vec{F}_{Em}$ exerted by the monitor on the Earth. The monitor does not accelerate because it is held up by the table. The table exerts on the monitor an upward force $\vec{n} = \vec{F}_{tm}$, called the **normal force**. (*Normal* in this context means *perpendicular*.) In general, whenever an object is in contact with a surface, the surface exerts a normal force on the object. The normal force on the monitor can have any value needed, up to the point of breaking the table. Because the monitor has zero acceleration, Newton's second law applied to the monitor gives us $\Sigma \vec{F} = \vec{n} + m\vec{g} = 0$, so $n\hat{j} - mg\hat{j} = 0$, or $n = mg$. The normal force balances the gravitational force on the monitor, so the net force on the monitor is zero. The reaction force to \vec{n} is the force exerted by the monitor downward on the table, $\vec{F}_{mt} = -\vec{F}_{tm} = -\vec{n}$.

Notice that the forces acting on the monitor are \vec{F}_g and \vec{n} as shown in Figure 5.6b. The two forces \vec{F}_{mE} and \vec{F}_{mt} are exerted on objects other than the monitor.

Figure 5.6 illustrates an extremely important step in solving problems involving forces. Figure 5.6a shows many of the forces in the situation: those acting on the monitor, one acting on the table, and one acting on the Earth. Figure 5.6b, by contrast, shows only the forces acting on *one object*, the monitor, and is called a **force diagram** or a *diagram showing the forces on the object*. The important pictorial representation in Figure 5.6c is called a **free-body diagram**. In a free-body diagram, the particle model is used by representing the object as a dot and showing the forces that act on the object as being applied to the dot. When analyzing an object subject to forces, we are interested in the net force acting on one object, which we will model as a particle. Therefore, a free-body diagram helps us isolate only those forces on the object and eliminate the other forces from our analysis.

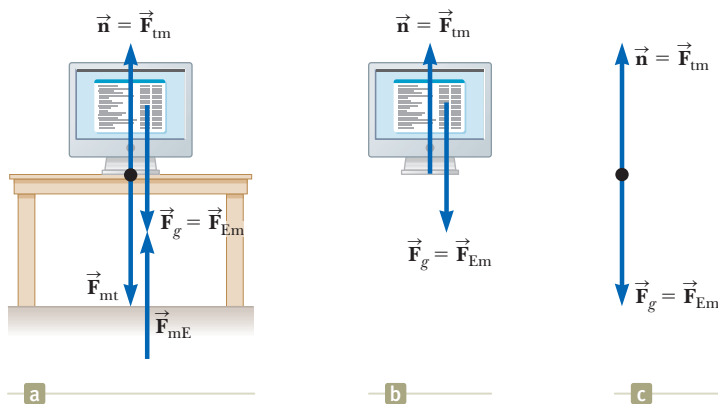


Figure 5.6 (a) When a computer monitor is at rest on a table, the forces acting on the monitor are the normal force \vec{n} and the gravitational force \vec{F}_g . The reaction to \vec{n} is the force \vec{F}_{mt} exerted by the monitor on the table. The reaction to \vec{F}_g is the force \vec{F}_{mE} exerted by the monitor on the Earth. (b) A *force diagram* shows the forces on the monitor. (c) A *free-body diagram* shows the monitor as a black dot with the forces acting on it.

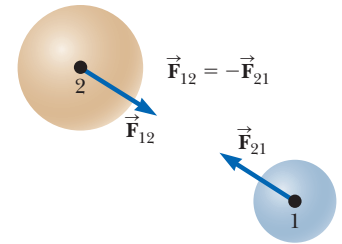


Figure 5.5 Newton's third law. The force \vec{F}_{12} exerted by object 1 on object 2 is equal in magnitude and opposite in direction to the force \vec{F}_{21} exerted by object 2 on object 1.

Pitfall Prevention 5.6

n* Does Not Always Equal *mg In the situation shown in Figure 5.6 and in many others, we find that $n = mg$ (the normal force has the same magnitude as the gravitational force). This result, however, is *not* generally true. If an object is on an incline, if there are applied forces with vertical components, or if there is a vertical acceleration of the system, then $n \neq mg$. *Always* apply Newton's second law to find the relationship between n and mg .

Pitfall Prevention 5.7

Newton's Third Law Remember that Newton's third-law action and reaction forces act on *different* objects. For example, in Figure 5.6, $\vec{n} = \vec{F}_{tm} = -m\vec{g} = -\vec{F}_{Em}$. The forces \vec{n} and $m\vec{g}$ are equal in magnitude and opposite in direction, but they do not represent an action–reaction pair because both forces act on the *same* object, the monitor.

Pitfall Prevention 5.8

Free-Body Diagrams The *most important* step in solving a problem using Newton's laws is to draw a proper sketch, the free-body diagram. Be sure to draw *only* those forces that act on the object you are isolating. Be sure to draw *all* forces acting on the object, including any field forces, such as the gravitational force.

- Quick Quiz 5.5** (i) If a fly collides with the windshield of a fast-moving bus, which experiences an impact force with a larger magnitude? (a) The fly. (b) The bus. (c) The same force is experienced by both. (ii) Which experiences the greater acceleration? (a) The fly. (b) The bus. (c) The same acceleration is experienced by both.

Conceptual Example 5.3

You Push Me and I'll Push You

A large man and a small boy stand facing each other on frictionless ice. They put their hands together and push against each other so that they move apart.

(A) Who moves away with the higher speed?

SOLUTION

This situation is similar to what we saw in Quick Quiz 5.5. According to Newton's third law, the force exerted by the man on the boy and the force exerted by the boy on the man are a third-law pair of forces, so they must be equal in magnitude. (A bathroom scale placed between their hands would read the same, regardless of which way it faced.) Therefore, the boy, having the smaller mass, experiences the greater acceleration. Both individuals accelerate for the same amount of time, but the greater acceleration of the boy over this time interval results in his moving away from the interaction with the higher speed.

(B) Who moves farther while their hands are in contact?

SOLUTION

Because the boy has the greater acceleration and therefore the greater average velocity, he moves farther than the man during the time interval during which their hands are in contact.

5.7 Analysis Models Using Newton's Second Law

In this section, we discuss two analysis models for solving problems in which objects are either in equilibrium ($\vec{a} = 0$) or accelerating under the action of constant external forces. Remember that when Newton's laws are applied to an object, we are interested only in external forces that act on the object. If the objects are modeled as particles, we need not worry about rotational motion. For now, we also neglect the effects of friction in those problems involving motion, which is equivalent to stating that the surfaces are *frictionless*. (The friction force is discussed in Section 5.8.)

We usually neglect the mass of any ropes, strings, or cables involved. In this approximation, the magnitude of the force exerted by any element of the rope on the adjacent element is the same for all elements along the rope. In problem statements, the synonymous terms *light* and *of negligible mass* are used to indicate that a mass is to be ignored when you work the problems. When a rope attached to an object is pulling on the object, the rope exerts a force on the object in a direction away from the object, parallel to the rope. The magnitude T of that force is called the **tension** in the rope. Because it is the magnitude of a vector quantity, tension is a scalar quantity.

Analysis Model: The Particle in Equilibrium

If the acceleration of an object modeled as a particle is zero, the object is treated with the **particle in equilibrium** model. In this model, the net force on the object is zero:

$$\sum \vec{F} = 0 \quad (5.8)$$

Consider a lamp suspended from a light chain fastened to the ceiling as in Figure 5.7a. The force diagram for the lamp (Fig. 5.7b) shows that the forces acting on the

lamp are the downward gravitational force \vec{F}_g and the upward force \vec{T} exerted by the chain. Because there are no forces in the x direction, $\Sigma F_x = 0$ provides no helpful information. The condition $\Sigma F_y = 0$ gives

$$\Sigma F_y = T - F_g = 0 \text{ or } T = F_g$$

Again, notice that \vec{T} and \vec{F}_g are *not* an action–reaction pair because they act on the same object, the lamp. The reaction force to \vec{T} is a downward force exerted by the lamp on the chain.

Example 5.4 (page 122) shows an application of the particle in equilibrium model.

Analysis Model: The Particle Under a Net Force

If an object experiences an acceleration, its motion can be analyzed with the **particle under a net force** model. The appropriate equation for this model is Newton's second law, Equation 5.2:

$$\Sigma \vec{F} = m\vec{a} \quad (5.2)$$

Consider a crate being pulled to the right on a frictionless, horizontal floor as in Figure 5.8a. Of course, the floor directly under the boy must have friction; otherwise, his feet would simply slip when he tries to pull on the crate! Suppose you wish to find the acceleration of the crate and the force the floor exerts on it. The forces acting on the crate are illustrated in the free-body diagram in Figure 5.8b. Notice that the horizontal force \vec{T} being applied to the crate acts through the rope. The magnitude of \vec{T} is equal to the tension in the rope. In addition to the force \vec{T} , the free-body diagram for the crate includes the gravitational force \vec{F}_g and the normal force \vec{n} exerted by the floor on the crate.

We can now apply Newton's second law in component form to the crate. The only force acting in the x direction is \vec{T} . Applying $\Sigma F_x = ma_x$ to the horizontal motion gives

$$\Sigma F_x = T = ma_x \text{ or } a_x = \frac{T}{m}$$

No acceleration occurs in the y direction because the crate moves only horizontally. Therefore, we use the particle in equilibrium model in the y direction. Applying the y component of Equation 5.8 yields

$$\Sigma F_y = n - F_g = 0 \text{ or } n = F_g$$

That is, the normal force has the same magnitude as the gravitational force but acts in the opposite direction.

If \vec{T} is a constant force, the acceleration $a_x = T/m$ also is constant. Hence, the crate is also modeled as a particle under constant acceleration in the x direction, and the equations of kinematics from Chapter 2 can be used to obtain the crate's position x and velocity v_x as functions of time.

Notice from this discussion two concepts that will be important in future problem solving: (1) *In a given problem, it is possible to have different analysis models applied in different directions.* The crate in Figure 5.8 is a particle in equilibrium in the vertical direction and a particle under a net force in the horizontal direction. (2) *It is possible to describe an object by multiple analysis models.* The crate is a particle under a net force in the horizontal direction and is also a particle under constant acceleration in the same direction.

In the situation just described, the magnitude of the normal force \vec{n} is equal to the magnitude of \vec{F}_g , but that is not always the case, as noted in Pitfall Prevention 5.6. For example, suppose a book is lying on a table and you push down on the book with a force \vec{F} as in Figure 5.9. Because the book is at rest and therefore not accelerating, $\Sigma F_y = 0$, which gives $n - F_g - F = 0$, or $n = F_g + F = mg + F$. In this situation, the normal force is *greater* than the gravitational force. Other examples in which $n \neq F_g$ are presented later.

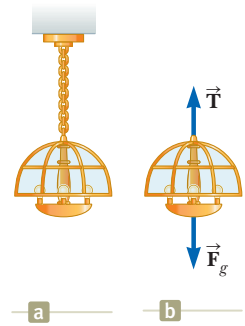


Figure 5.7 (a) A lamp suspended from a ceiling by a chain of negligible mass. (b) The forces acting on the lamp are the gravitational force \vec{F}_g and the force \vec{T} exerted by the chain.

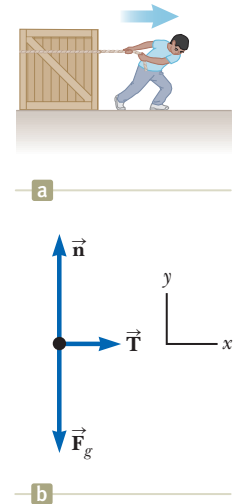


Figure 5.8 (a) A crate being pulled to the right on a frictionless floor. (b) The free-body diagram representing the external forces acting on the crate.

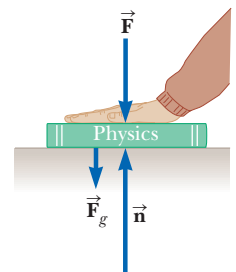


Figure 5.9 When a force \vec{F} pushes vertically downward on another object, the normal force \vec{n} on the object is greater than the gravitational force: $n = F_g + F$.

Several examples below demonstrate the use of the particle under a net force model.

Analysis Model Particle in Equilibrium

Imagine an object that can be modeled as a particle. If it has several forces acting on it so that the forces all cancel, giving a net force of zero, the object will have an acceleration of zero. This condition is mathematically described as

$$\sum \vec{\mathbf{F}} = 0 \quad (5.8)$$

$$\vec{\mathbf{a}} = 0$$

$$\Sigma \vec{\mathbf{F}} = 0$$

Examples

- a chandelier hanging over a dining room table
- an object moving at terminal speed through a viscous medium (Chapter 6)
- a steel beam in the frame of a building (Chapter 12)
- a boat floating on a body of water (Chapter 14)

Analysis Model Particle Under a Net Force

Imagine an object that can be modeled as a particle. If it has one or more forces acting on it so that there is a net force on the object, it will accelerate in the direction of the net force. The relationship between the net force and the acceleration is

$$\sum \vec{\mathbf{F}} = m \vec{\mathbf{a}} \quad (5.2)$$

$$\Sigma \vec{\mathbf{F}}$$

Examples

- a crate pushed across a factory floor
- a falling object acted upon by a gravitational force
- a piston in an automobile engine pushed by hot gases (Chapter 22)
- a charged particle in an electric field (Chapter 23)

Example 5.4 A Traffic Light at Rest AM

A traffic light weighing 122 N hangs from a cable tied to two other cables fastened to a support as in Figure 5.10a. The upper cables make angles of $\theta_1 = 37.0^\circ$ and $\theta_2 = 53.0^\circ$ with the horizontal. These upper cables are not as strong as the vertical cable and will break if the tension in them exceeds 100 N. Does the traffic light remain hanging in this situation, or will one of the cables break?

SOLUTION

Conceptualize Inspect the drawing in Figure 5.10a. Let us assume the cables do not break and nothing is moving.

Categorize If nothing is moving, no part of the system is accelerating. We can now model the light as a *particle in equilibrium* on which the net force is zero. Similarly, the net force on the knot (Fig. 5.10c) is zero, so it is also modeled as a *particle in equilibrium*.

Analyze We construct a diagram of the forces acting on the traffic light, shown in Figure 5.10b, and a free-body diagram for the knot that holds the three cables together, shown in Figure 5.10c. This knot is a convenient object to choose because all the forces of interest act along lines passing through the knot.

From the particle in equilibrium model, apply Equation 5.8 for the traffic light in the y direction:

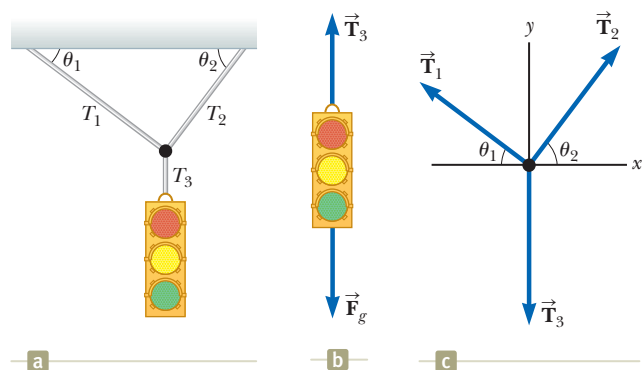


Figure 5.10 (Example 5.4) (a) A traffic light suspended by cables. (b) The forces acting on the traffic light. (c) The free-body diagram for the knot where the three cables are joined.

$$\sum F_y = 0 \rightarrow T_3 - F_g = 0$$

$$T_3 = F_g$$

5.4 continued

Choose the coordinate axes as shown in Figure 5.10c and resolve the forces acting on the knot into their components:

Force	x Component	y Component
\vec{T}_1	$-T_1 \cos \theta_1$	$T_1 \sin \theta_1$
\vec{T}_2	$T_2 \cos \theta_2$	$T_2 \sin \theta_2$
\vec{T}_3	0	$-F_g$

Apply the particle in equilibrium model to the knot:

$$(1) \quad \sum F_x = -T_1 \cos \theta_1 + T_2 \cos \theta_2 = 0$$

$$(2) \quad \sum F_y = T_1 \sin \theta_1 + T_2 \sin \theta_2 + (-F_g) = 0$$

Equation (1) shows that the horizontal components of \vec{T}_1 and \vec{T}_2 must be equal in magnitude, and Equation (2) shows that the sum of the vertical components of \vec{T}_1 and \vec{T}_2 must balance the downward force \vec{T}_3 , which is equal in magnitude to the weight of the light.

Solve Equation (1) for T_2 in terms of T_1 :

$$(3) \quad T_2 = T_1 \left(\frac{\cos \theta_1}{\cos \theta_2} \right)$$

Substitute this value for T_2 into Equation (2):

$$T_1 \sin \theta_1 + T_1 \left(\frac{\cos \theta_1}{\cos \theta_2} \right) (\sin \theta_2) - F_g = 0$$

Solve for T_1 :

$$T_1 = \frac{F_g}{\sin \theta_1 + \cos \theta_1 \tan \theta_2}$$

Substitute numerical values:

$$T_1 = \frac{122 \text{ N}}{\sin 37.0^\circ + \cos 37.0^\circ \tan 53.0^\circ} = 73.4 \text{ N}$$

Using Equation (3), solve for T_2 :

$$T_2 = (73.4 \text{ N}) \left(\frac{\cos 37.0^\circ}{\cos 53.0^\circ} \right) = 97.4 \text{ N}$$

Both values are less than 100 N (just barely for T_2), so the cables will not break.

Finalize Let us finalize this problem by imagining a change in the system, as in the following What If?

WHAT IF? Suppose the two angles in Figure 5.10a are equal. What would be the relationship between T_1 and T_2 ?

Answer We can argue from the symmetry of the problem that the two tensions T_1 and T_2 would be equal to each other. Mathematically, if the equal angles are called θ , Equation (3) becomes

$$T_2 = T_1 \left(\frac{\cos \theta}{\cos \theta} \right) = T_1$$

which also tells us that the tensions are equal. Without knowing the specific value of θ , we cannot find the values of T_1 and T_2 . The tensions will be equal to each other, however, regardless of the value of θ .

Conceptual Example 5.5

Forces Between Cars in a Train

Train cars are connected by *couplers*, which are under tension as the locomotive pulls the train. Imagine you are on a train speeding up with a constant acceleration. As you move through the train from the locomotive to the last car, measuring the tension in each set of couplers, does the tension increase, decrease, or stay the same? When the engineer applies the brakes, the couplers are under compression. How does this compression force vary from the locomotive to the last car? (Assume only the brakes on the wheels of the engine are applied.)

SOLUTION

While the train is speeding up, tension decreases from the front of the train to the back. The coupler between the locomotive and the first car must apply enough force to accelerate the rest of the cars. As you move back along the

continued

5.5 continued

train, each coupler is accelerating less mass behind it. The last coupler has to accelerate only the last car, and so it is under the least tension.

When the brakes are applied, the force again decreases from front to back. The coupler connecting the locomotive to the first car must apply a large force to slow down the rest of the cars, but the final coupler must apply a force large enough to slow down only the last car.

Example 5.6 The Runaway Car AM

A car of mass m is on an icy driveway inclined at an angle θ as in Figure 5.11a.

(A) Find the acceleration of the car, assuming the driveway is frictionless.

SOLUTION

Conceptualize Use Figure 5.11a to conceptualize the situation. From everyday experience, we know that a car on an icy incline will accelerate down the incline. (The same thing happens to a car on a hill with its brakes not set.)

Categorize We categorize the car as a *particle under a net force* because it accelerates. Furthermore, this example belongs to a very common category of problems in which an object moves under the influence of gravity on an inclined plane.

Analyze Figure 5.11b shows the free-body diagram for the car. The only forces acting on the car are the normal force \vec{n} exerted by the inclined plane, which acts perpendicular to the plane, and the gravitational force $\vec{F}_g = m\vec{g}$, which acts vertically downward. For problems involving inclined planes, it is convenient to choose the coordinate axes with x along the incline and y perpendicular to it as in Figure 5.11b. With these axes, we represent the gravitational force by a component of magnitude $mg \sin \theta$ along the positive x axis and one of magnitude $mg \cos \theta$ along the negative y axis. Our choice of axes results in the car being modeled as a particle under a net force in the x direction and a particle in equilibrium in the y direction.

Apply these models to the car:

$$(1) \quad \sum F_x = mg \sin \theta = ma_x$$

$$(2) \quad \sum F_y = n - mg \cos \theta = 0$$

Solve Equation (1) for a_x :

$$(3) \quad a_x = g \sin \theta$$

Finalize Note that the acceleration component a_x is independent of the mass of the car! It depends only on the angle of inclination and on g .

From Equation (2), we conclude that the component of \vec{F}_g perpendicular to the incline is balanced by the normal force; that is, $n = mg \cos \theta$. This situation is a case in which the normal force is *not* equal in magnitude to the weight of the object (as discussed in Pitfall Prevention 5.6 on page 119).

It is possible, although inconvenient, to solve the problem with “standard” horizontal and vertical axes. You may want to try it, just for practice.

(B) Suppose the car is released from rest at the top of the incline and the distance from the car’s front bumper to the bottom of the incline is d . How long does it take the front bumper to reach the bottom of the hill, and what is the car’s speed as it arrives there?

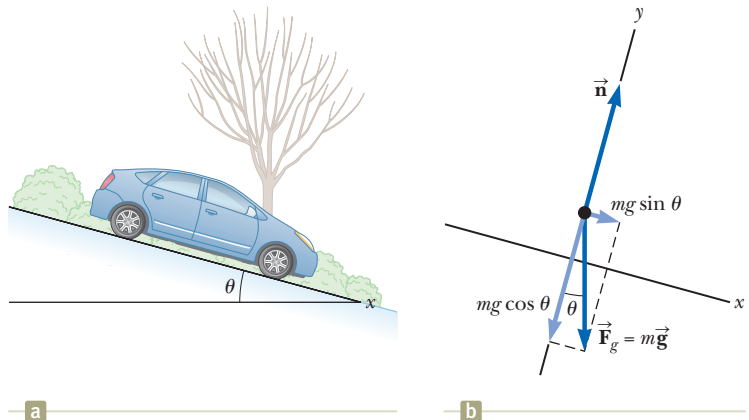


Figure 5.11 (Example 5.6) (a) A car on a frictionless incline. (b) The free-body diagram for the car. The black dot represents the position of the center of mass of the car. We will learn about center of mass in Chapter 9.

5.6 continued

SOLUTION

Conceptualize Imagine the car is sliding down the hill and you use a stopwatch to measure the entire time interval until it reaches the bottom.

Categorize This part of the problem belongs to kinematics rather than to dynamics, and Equation (3) shows that the acceleration a_x is constant. Therefore, you should categorize the car in this part of the problem as a particle under constant acceleration.

Analyze Defining the initial position of the front bumper as $x_i = 0$ and its final position as $x_f = d$, and recognizing that $v_{xi} = 0$, choose Equation 2.16 from the particle under constant acceleration model, $x_f = x_i + v_{xi}t + \frac{1}{2}a_x t^2$:

$$d = \frac{1}{2}a_x t^2$$

Solve for t :

$$(4) \quad t = \sqrt{\frac{2d}{a_x}} = \sqrt{\frac{2d}{g \sin \theta}}$$

Use Equation 2.17, with $v_{xi} = 0$, to find the final velocity of the car:

$$(5) \quad v_{xf}^2 = 2a_x d \quad v_{xf} = \sqrt{2a_x d} = \sqrt{2gd \sin \theta}$$

Finalize We see from Equations (4) and (5) that the time t at which the car reaches the bottom and its final speed v_{xf} are independent of the car's mass, as was its acceleration. Notice that we have combined techniques from Chapter 2 with new techniques from this chapter in this example. As we learn more techniques in later chapters, this process of combining analysis models and information from several parts of the book will occur more often. In these cases, use the General Problem-Solving Strategy to help you identify what analysis models you will need.

WHAT IF? What previously solved problem does this situation become if $\theta = 90^\circ$?

Answer Imagine θ going to 90° in Figure 5.11. The inclined plane becomes vertical, and the car is an object in free fall! Equation (3) becomes

$$a_x = g \sin \theta = g \sin 90^\circ = g$$

which is indeed the free-fall acceleration. (We find $a_x = g$ rather than $a_x = -g$ because we have chosen positive x to be downward in Fig. 5.11.) Notice also that the condition $n = mg \cos \theta$ gives us $n = mg \cos 90^\circ = 0$. That is consistent with the car falling downward *next to* the vertical plane, in which case there is no contact force between the car and the plane.

Example 5.7 One Block Pushes Another AM

Two blocks of masses m_1 and m_2 , with $m_1 > m_2$, are placed in contact with each other on a frictionless, horizontal surface as in Figure 5.12a. A constant horizontal force \vec{F} is applied to m_1 as shown.

(A) Find the magnitude of the acceleration of the system.

SOLUTION

Conceptualize Conceptualize the situation by using Figure 5.12a and realize that both blocks must experience the *same* acceleration because they are in contact with each other and remain in contact throughout the motion.

Categorize We categorize this problem as one involving a *particle under a net force* because a force is applied to a system of blocks and we are looking for the acceleration of the system.

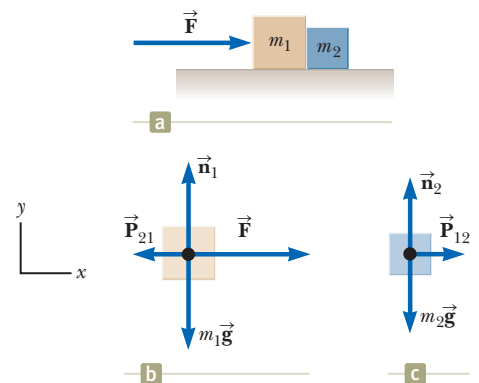


Figure 5.12 (Example 5.7) (a) A force is applied to a block of mass m_1 , which pushes on a second block of mass m_2 . (b) The forces acting on m_1 . (c) The forces acting on m_2 .

continued

5.7 continued

Analyze First model the combination of two blocks as a single particle under a net force. Apply Newton's second law to the combination in the x direction to find the acceleration:

$$\sum F_x = F = (m_1 + m_2)a_x$$

$$(1) \quad a_x = \frac{F}{m_1 + m_2}$$

Finalize The acceleration given by Equation (1) is the same as that of a single object of mass $m_1 + m_2$ and subject to the same force.

(B) Determine the magnitude of the contact force between the two blocks.

SOLUTION

Conceptualize The contact force is internal to the system of two blocks. Therefore, we cannot find this force by modeling the whole system (the two blocks) as a single particle.

Categorize Now consider each of the two blocks individually by categorizing each as a *particle under a net force*.

Analyze We construct a diagram of forces acting on the object for each block as shown in Figures 5.12b and 5.12c, where the contact force is denoted by \vec{P} . From Figure 5.12c, we see that the only horizontal force acting on m_2 is the contact force \vec{P}_{12} (the force exerted by m_1 on m_2), which is directed to the right.

Apply Newton's second law to m_2 :

$$(2) \quad \sum F_x = P_{12} = m_2 a_x$$

Substitute the value of the acceleration a_x given by Equation (1) into Equation (2):

$$(3) \quad P_{12} = m_2 a_x = \left(\frac{m_2}{m_1 + m_2} \right) F$$

Finalize This result shows that the contact force P_{12} is *less* than the applied force F . The force required to accelerate block 2 alone must be less than the force required to produce the same acceleration for the two-block system.

To finalize further, let us check this expression for P_{12} by considering the forces acting on m_1 , shown in Figure 5.12b. The horizontal forces acting on m_1 are the applied force \vec{F} to the right and the contact force \vec{P}_{21} to the left (the force exerted by m_2 on m_1). From Newton's third law, \vec{P}_{21} is the reaction force to \vec{P}_{12} , so $P_{21} = P_{12}$.

Apply Newton's second law to m_1 :

$$(4) \quad \sum F_x = F - P_{21} = F - P_{12} = m_1 a_x$$

Solve for P_{12} and substitute the value of a_x from Equation (1):

$$P_{12} = F - m_1 a_x = F - m_1 \left(\frac{F}{m_1 + m_2} \right) = \left(\frac{m_2}{m_1 + m_2} \right) F$$

This result agrees with Equation (3), as it must.

WHAT IF? Imagine that the force \vec{F} in Figure 5.12 is applied toward the left on the right-hand block of mass m_2 . Is the magnitude of the force \vec{P}_{12} the same as it was when the force was applied toward the right on m_1 ?

Answer When the force is applied toward the left on m_2 , the contact force must accelerate m_1 . In the original situation, the contact force accelerates m_2 . Because $m_1 > m_2$, more force is required, so the magnitude of \vec{P}_{12} is greater than in the original situation. To see this mathematically, modify Equation (4) appropriately and solve for \vec{P}_{12} .

Example 5.8 Weighing a Fish in an Elevator

AM

A person weighs a fish of mass m on a spring scale attached to the ceiling of an elevator as illustrated in Figure 5.13.

(A) Show that if the elevator accelerates either upward or downward, the spring scale gives a reading that is different from the weight of the fish.

5.8 continued

SOLUTION

Conceptualize The reading on the scale is related to the extension of the spring in the scale, which is related to the force on the end of the spring as in Figure 5.2. Imagine that the fish is hanging on a string attached to the end of the spring. In this case, the magnitude of the force exerted on the spring is equal to the tension T in the string. Therefore, we are looking for T . The force \vec{T} pulls down on the string and pulls up on the fish.

Categorize We can categorize this problem by identifying the fish as a *particle in equilibrium* if the elevator is not accelerating or as a *particle under a net force* if the elevator is accelerating.

Analyze Inspect the diagrams of the forces acting on the fish in Figure 5.13 and notice that the external forces acting on the fish are the downward gravitational force $\vec{F}_g = m\vec{g}$ and the force \vec{T} exerted by the string. If the elevator is either at rest or moving at constant velocity, the fish is a particle in equilibrium, so $\sum F_y = T - F_g = 0$ or $T = F_g = mg$. (Remember that the scalar mg is the weight of the fish.)

Now suppose the elevator is moving with an acceleration \vec{a} relative to an observer standing outside the elevator in an inertial frame. The fish is now a particle under a net force.

Apply Newton's second law to the fish:

$$\sum F_y = T - mg = ma_y$$

Solve for T :

$$(1) \quad T = ma_y + mg = mg \left(\frac{a_y}{g} + 1 \right) = F_g \left(\frac{a_y}{g} + 1 \right)$$

where we have chosen upward as the positive y direction. We conclude from Equation (1) that the scale reading T is greater than the fish's weight mg if \vec{a} is upward, so a_y is positive (Fig. 5.13a), and that the reading is less than mg if \vec{a} is downward, so a_y is negative (Fig. 5.13b).

(B) Evaluate the scale readings for a 40.0-N fish if the elevator moves with an acceleration $a_y = \pm 2.00 \text{ m/s}^2$.

SOLUTION

Evaluate the scale reading from Equation (1) if \vec{a} is upward: $T = (40.0 \text{ N}) \left(\frac{2.00 \text{ m/s}^2}{9.80 \text{ m/s}^2} + 1 \right) = 48.2 \text{ N}$

Evaluate the scale reading from Equation (1) if \vec{a} is downward: $T = (40.0 \text{ N}) \left(\frac{-2.00 \text{ m/s}^2}{9.80 \text{ m/s}^2} + 1 \right) = 31.8 \text{ N}$

Finalize Take this advice: if you buy a fish in an elevator, make sure the fish is weighed while the elevator is either at rest or accelerating downward! Furthermore, notice that from the information given here, one cannot determine the direction of the velocity of the elevator.

WHAT IF? Suppose the elevator cable breaks and the elevator and its contents are in free fall. What happens to the reading on the scale?

Answer If the elevator falls freely, the fish's acceleration is $a_y = -g$. We see from Equation (1) that the scale reading T is zero in this case; that is, the fish *appears* to be weightless.




Figure 5.13 (Example 5.8) A fish is weighed on a spring scale in an accelerating elevator car.

Example 5.9

The Atwood Machine **AM**

When two objects of unequal mass are hung vertically over a frictionless pulley of negligible mass as in Figure 5.14a, the arrangement is called an *Atwood machine*. The device is sometimes used in the laboratory to determine the value of g . Determine the magnitude of the acceleration of the two objects and the tension in the lightweight string.

SOLUTION

Conceptualize Imagine the situation pictured in Figure 5.14a in action: as one object moves upward, the other object moves downward. Because the objects are connected by an inextensible string, their accelerations must be of equal magnitude.

Categorize The objects in the Atwood machine are subject to the gravitational force as well as to the forces exerted by the strings connected to them. Therefore, we can categorize this problem as one involving two *particles under a net force*.

Analyze The free-body diagrams for the two objects are shown in Figure 5.14b. Two forces act on each object: the upward force \vec{T} exerted by the string and the downward gravitational force. In problems such as this one in which the pulley is modeled as massless and frictionless, the tension in the string on both sides of the pulley is the same. If the pulley has mass or is subject to friction, the tensions on either side are not the same and the situation requires techniques we will learn in Chapter 10.

We must be very careful with signs in problems such as this one. In Figure 5.14a, notice that if object 1 accelerates upward, object 2 accelerates downward. Therefore, for consistency with signs, if we define the upward direction as positive for object 1, we must define the downward direction as positive for object 2. With this sign convention, both objects accelerate in the same direction as defined by the choice of sign. Furthermore, according to this sign convention, the y component of the net force exerted on object 1 is $T - m_1g$, and the y component of the net force exerted on object 2 is $m_2g - T$.

From the particle under a net force model, apply Newton's second law to object 1:

$$(1) \quad \sum F_y = T - m_1g = m_1a_y$$

Apply Newton's second law to object 2:

$$(2) \quad \sum F_y = m_2g - T = m_2a_y$$

Add Equation (2) to Equation (1), noticing that T cancels:

$$-m_1g + m_2g = m_1a_y + m_2a_y$$

Solve for the acceleration:

$$(3) \quad a_y = \left(\frac{m_2 - m_1}{m_1 + m_2} \right) g$$

Substitute Equation (3) into Equation (1) to find T :

$$(4) \quad T = m_1(g + a_y) = \left(\frac{2m_1m_2}{m_1 + m_2} \right) g$$

Finalize The acceleration given by Equation (3) can be interpreted as the ratio of the magnitude of the unbalanced force on the system $(m_2 - m_1)g$ to the total mass of the system $(m_1 + m_2)$, as expected from Newton's second law. Notice that the sign of the acceleration depends on the relative masses of the two objects.

WHAT IF? Describe the motion of the system if the objects have equal masses, that is, $m_1 = m_2$.

Answer If we have the same mass on both sides, the system is balanced and should not accelerate. Mathematically, we see that if $m_1 = m_2$, Equation (3) gives us $a_y = 0$.

WHAT IF? What if one of the masses is much larger than the other: $m_1 \gg m_2$?

Answer In the case in which one mass is infinitely larger than the other, we can ignore the effect of the smaller mass. Therefore, the larger mass should simply fall as if the smaller mass were not there. We see that if $m_1 \gg m_2$, Equation (3) gives us $a_y = -g$.

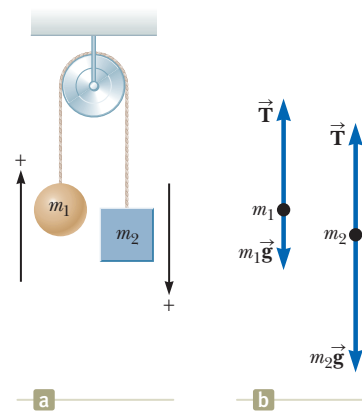


Figure 5.14 (Example 5.9) The Atwood machine. (a) Two objects connected by a massless inextensible string over a frictionless pulley. (b) The free-body diagrams for the two objects.

Example 5.10 Acceleration of Two Objects Connected by a Cord AM

A ball of mass m_1 and a block of mass m_2 are attached by a lightweight cord that passes over a frictionless pulley of negligible mass as in Figure 5.15a. The block lies on a frictionless incline of angle θ . Find the magnitude of the acceleration of the two objects and the tension in the cord.

SOLUTION

Conceptualize Imagine the objects in Figure 5.15 in motion. If m_2 moves down the incline, then m_1 moves upward. Because the objects are connected by a cord (which we assume does not stretch), their accelerations have the same magnitude. Notice the normal coordinate axes in Figure 5.15b for the ball and the “tilted” axes for the block in Figure 5.15c.

Categorize We can identify forces on each of the two objects and we are looking for an acceleration, so we categorize the objects as *particles under a net force*. For the block, this model is only valid for the x' direction. In the y' direction, we apply the *particle in equilibrium* model because the block does not accelerate in that direction.

Analyze Consider the free-body diagrams shown in Figures 5.15b and 5.15c.

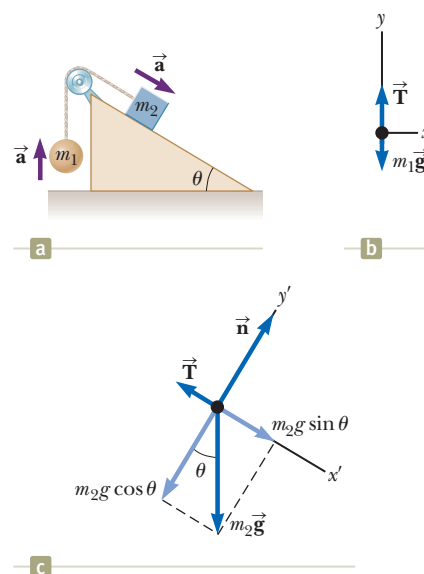


Figure 5.15 (Example 5.10) (a) Two objects connected by a lightweight cord strung over a frictionless pulley. (b) The free-body diagram for the ball. (c) The free-body diagram for the block. (The incline is frictionless.)

Apply Newton's second law in the y direction to the ball, choosing the upward direction as positive:

$$(1) \quad \sum F_y = T - m_1g = m_1a_y = m_1a$$

For the ball to accelerate upward, it is necessary that $T > m_1g$. In Equation (1), we replaced a_y with a because the acceleration has only a y component.

For the block, we have chosen the x' axis along the incline as in Figure 5.15c. For consistency with our choice for the ball, we choose the positive x' direction to be down the incline.

Apply the particle under a net force model to the block in the x' direction and the particle in equilibrium model in the y' direction:

$$(2) \quad \sum F_{x'} = m_2g \sin \theta - T = m_2a_{x'} = m_2a$$

$$(3) \quad \sum F_{y'} = n - m_2g \cos \theta = 0$$

In Equation (2), we replaced $a_{x'}$ with a because the two objects have accelerations of equal magnitude a .

Solve Equation (1) for T :

$$(4) \quad T = m_1(g + a)$$

Substitute this expression for T into Equation (2):

$$m_2g \sin \theta - m_1(g + a) = m_2a$$

Solve for a :

$$(5) \quad a = \left(\frac{m_2 \sin \theta - m_1}{m_1 + m_2} \right) g$$

Substitute this expression for a into Equation (4) to find T :

$$(6) \quad T = \left(\frac{m_1 m_2 (\sin \theta + 1)}{m_1 + m_2} \right) g$$

Finalize The block accelerates down the incline only if $m_2 \sin \theta > m_1$. If $m_1 > m_2 \sin \theta$, the acceleration is up the incline for the block and downward for the ball. Also notice that the result for the acceleration, Equation (5), can be interpreted as the magnitude of the net external force acting on the ball–block system divided by the total mass of the system; this result is consistent with Newton's second law.

WHAT IF? What happens in this situation if $\theta = 90^\circ$?

continued

5.10 continued

Answer If $\theta = 90^\circ$, the inclined plane becomes vertical and there is no interaction between its surface and m_2 . Therefore, this problem becomes the Atwood machine of Example 5.9. Letting $\theta \rightarrow 90^\circ$ in Equations (5) and (6) causes them to reduce to Equations (3) and (4) of Example 5.9!

WHAT IF? What if $m_1 = 0$?

Answer If $m_1 = 0$, then m_2 is simply sliding down an inclined plane without interacting with m_1 through the string. Therefore, this problem becomes the sliding car problem in Example 5.6. Letting $m_1 \rightarrow 0$ in Equation (5) causes it to reduce to Equation (3) of Example 5.6!

5.8 Forces of Friction

When an object is in motion either on a surface or in a viscous medium such as air or water, there is resistance to the motion because the object interacts with its surroundings. We call such resistance a **force of friction**. Forces of friction are very important in our everyday lives. They allow us to walk or run and are necessary for the motion of wheeled vehicles.

Imagine that you are working in your garden and have filled a trash can with yard clippings. You then try to drag the trash can across the surface of your concrete patio as in Figure 5.16a. This surface is *real*, not an idealized, frictionless surface. If we apply an external horizontal force \vec{F} to the trash can, acting to the right, the trash can remains stationary when \vec{F} is small. The force on the trash can that counteracts \vec{F} and keeps it from moving acts toward the left and is called the

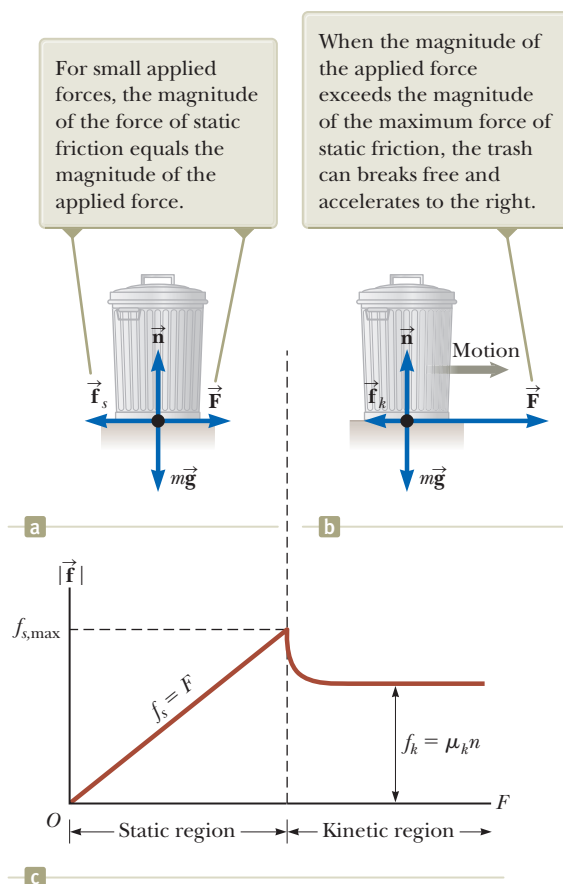


Figure 5.16 (a) and (b) When pulling on a trash can, the direction of the force of friction \vec{f} between the can and a rough surface is opposite the direction of the applied force \vec{F} . (c) A graph of friction force versus applied force. Notice that $f_{s,\max} > f_k$.

force of static friction \vec{f}_s . As long as the trash can is not moving, $f_s = F$. Therefore, if \vec{F} is increased, \vec{f}_s also increases. Likewise, if \vec{F} decreases, \vec{f}_s also decreases.

Experiments show that the friction force arises from the nature of the two surfaces: because of their roughness, contact is made only at a few locations where peaks of the material touch. At these locations, the friction force arises in part because one peak physically blocks the motion of a peak from the opposing surface and in part from chemical bonding (“spot welds”) of opposing peaks as they come into contact. Although the details of friction are quite complex at the atomic level, this force ultimately involves an electrical interaction between atoms or molecules.

If we increase the magnitude of \vec{F} as in Figure 5.16b, the trash can eventually slips. When the trash can is on the verge of slipping, f_s has its maximum value $f_{s,\max}$ as shown in Figure 5.16c. When F exceeds $f_{s,\max}$, the trash can moves and accelerates to the right. We call the friction force for an object in motion the **force of kinetic friction** \vec{f}_k . When the trash can is in motion, the force of kinetic friction on the can is less than $f_{s,\max}$ (Fig. 5.16c). The net force $F - f_k$ in the x direction produces an acceleration to the right, according to Newton’s second law. If $F = f_k$, the acceleration is zero and the trash can moves to the right with constant speed. If the applied force \vec{F} is removed from the moving can, the friction force \vec{f}_k acting to the left provides an acceleration of the trash can in the $-x$ direction and eventually brings it to rest, again consistent with Newton’s second law.

Experimentally, we find that, to a good approximation, both $f_{s,\max}$ and f_k are proportional to the magnitude of the normal force exerted on an object by the surface. The following descriptions of the force of friction are based on experimental observations and serve as the simplification model we shall use for forces of friction in problem solving:

- The magnitude of the force of static friction between any two surfaces in contact can have the values

$$f_s \leq \mu_s n \quad (5.9)$$

where the dimensionless constant μ_s is called the **coefficient of static friction** and n is the magnitude of the normal force exerted by one surface on the other. The equality in Equation 5.9 holds when the surfaces are on the verge of slipping, that is, when $f_s = f_{s,\max} = \mu_s n$. This situation is called *impending motion*. The inequality holds when the surfaces are not on the verge of slipping.

- The magnitude of the force of kinetic friction acting between two surfaces is

$$f_k = \mu_k n \quad (5.10)$$

where μ_k is the **coefficient of kinetic friction**. Although the coefficient of kinetic friction can vary with speed, we shall usually neglect any such variations in this text.

- The values of μ_k and μ_s depend on the nature of the surfaces, but μ_k is generally less than μ_s . Typical values range from around 0.03 to 1.0. Table 5.1 (page 132) lists some reported values.
- The direction of the friction force on an object is parallel to the surface with which the object is in contact and opposite to the actual motion (kinetic friction) or the impending motion (static friction) of the object relative to the surface.
- The coefficients of friction are nearly independent of the area of contact between the surfaces. We might expect that placing an object on the side having the most area might increase the friction force. Although this method provides more points in contact, the weight of the object is spread out over a larger area and the individual points are not pressed together as tightly. Because these effects approximately compensate for each other, the friction force is independent of the area.

◀ Force of static friction

◀ Force of kinetic friction

Pitfall Prevention 5.9

The Equal Sign Is Used in Limited Situations In Equation 5.9, the equal sign is used *only* in the case in which the surfaces are just about to break free and begin sliding. Do not fall into the common trap of using $f_s = \mu_s n$ in *any* static situation.

Pitfall Prevention 5.10

Friction Equations Equations 5.9 and 5.10 are *not* vector equations. They are relationships between the *magnitudes* of the vectors representing the friction and normal forces. Because the friction and normal forces are perpendicular to each other, the vectors cannot be related by a multiplicative constant.

Pitfall Prevention 5.11

The Direction of the Friction Force Sometimes, an incorrect statement about the friction force between an object and a surface is made—“the friction force on an object is opposite to its motion or impending motion”—rather than the correct phrasing, “the friction force on an object is opposite to its motion or impending motion *relative to the surface*.”

Table 5.1 Coefficients of Friction

	μ_s	μ_k
Rubber on concrete	1.0	0.8
Steel on steel	0.74	0.57
Aluminum on steel	0.61	0.47
Glass on glass	0.94	0.4
Copper on steel	0.53	0.36
Wood on wood	0.25–0.5	0.2
Waxed wood on wet snow	0.14	0.1
Waxed wood on dry snow	—	0.04
Metal on metal (lubricated)	0.15	0.06
Teflon on Teflon	0.04	0.04
Ice on ice	0.1	0.03
Synovial joints in humans	0.01	0.003

Note: All values are approximate. In some cases, the coefficient of friction can exceed 1.0.

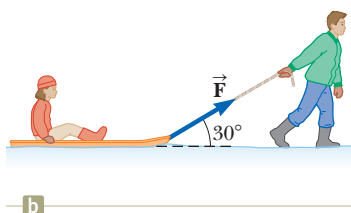
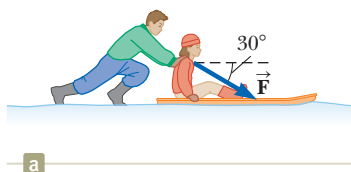


Figure 5.17 (Quick Quiz 5.7) A father slides his daughter on a sled either by (a) pushing down on her shoulders or (b) pulling up on a rope.

Quick Quiz 5.6 You press your physics textbook flat against a vertical wall with your hand. What is the direction of the friction force exerted by the wall on the book? (a) downward (b) upward (c) out from the wall (d) into the wall

Quick Quiz 5.7 You are playing with your daughter in the snow. She sits on a sled and asks you to slide her across a flat, horizontal field. You have a choice of (a) pushing her from behind by applying a force downward on her shoulders at 30° below the horizontal (Fig. 5.17a) or (b) attaching a rope to the front of the sled and pulling with a force at 30° above the horizontal (Fig. 5.17b). Which would be easier for you and why?

Example 5.11**Experimental Determination of μ_s and μ_k** **AM**

The following is a simple method of measuring coefficients of friction. Suppose a block is placed on a rough surface inclined relative to the horizontal as shown in Figure 5.18. The incline angle is increased until the block starts to move. Show that you can obtain μ_s by measuring the critical angle θ_c at which this slipping just occurs.

SOLUTION

Conceptualize Consider Figure 5.18 and imagine that the block tends to slide down the incline due to the gravitational force. To simulate the situation, place a coin on this book's cover and tilt the book until the coin begins to slide. Notice how this example differs from Example 5.6. When there is no friction on an incline, *any* angle of the incline will cause a stationary object to begin moving. When there is friction, however, there is no movement of the object for angles less than the critical angle.

Categorize The block is subject to various forces. Because we are raising the plane to the angle at which the block is just ready to begin to move but is not moving, we categorize the block as a *particle in equilibrium*.

Analyze The diagram in Figure 5.18 shows the forces on the block: the gravitational force $m\vec{g}$, the normal force \vec{n} , and the force of static friction \vec{f}_s . We choose x to be parallel to the plane and y perpendicular to it.

From the particle in equilibrium model, apply Equation 5.8 to the block in both the x and y directions:

$$(1) \quad \sum F_x = mg \sin \theta - f_s = 0$$

$$(2) \quad \sum F_y = n - mg \cos \theta = 0$$

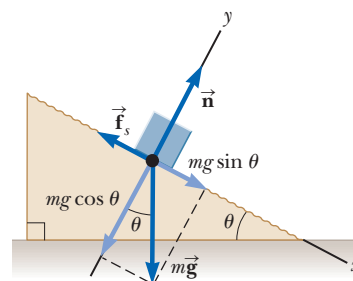


Figure 5.18 (Example 5.11) The external forces exerted on a block lying on a rough incline are the gravitational force $m\vec{g}$, the normal force \vec{n} , and the force of friction \vec{f}_s . For convenience, the gravitational force is resolved into a component $mg \sin \theta$ along the incline and a component $mg \cos \theta$ perpendicular to the incline.

► 5.11 continued

Substitute $mg = n/\cos \theta$ from Equation (2) into Equation (1):

$$(3) \quad f_s = mg \sin \theta = \left(\frac{n}{\cos \theta} \right) \sin \theta = n \tan \theta$$

When the incline angle is increased until the block is on the verge of slipping, the force of static friction has reached its maximum value $\mu_s n$. The angle θ in this situation is the critical angle θ_c . Make these substitutions in Equation (3):

$$\mu_s n = n \tan \theta_c$$

$$\mu_s = \tan \theta_c$$

We have shown, as requested, that the coefficient of static friction is related only to the critical angle. For example, if the block just slips at $\theta_c = 20.0^\circ$, we find that $\mu_s = \tan 20.0^\circ = 0.364$.

Finalize Once the block starts to move at $\theta \geq \theta_c$, it accelerates down the incline and the force of friction is $f_k = \mu_k n$. If θ is reduced to a value less than θ_c , however, it may be possible to find an angle θ'_c such that the block moves down the incline with constant speed as a particle in equilibrium again ($a_x = 0$). In this case, use Equations (1) and (2) with f_s replaced by f_k to find μ_k : $\mu_k = \tan \theta'_c$, where $\theta'_c < \theta_c$.

Example 5.12 The Sliding Hockey Puck **AM**

A hockey puck on a frozen pond is given an initial speed of 20.0 m/s. If the puck always remains on the ice and slides 115 m before coming to rest, determine the coefficient of kinetic friction between the puck and ice.

SOLUTION

Conceptualize Imagine that the puck in Figure 5.19 slides to the right. The kinetic friction force acts to the left and slows the puck, which eventually comes to rest due to that force.

Categorize The forces acting on the puck are identified in Figure 5.19, but the text of the problem provides kinematic variables. Therefore, we categorize the problem in several ways. First, it involves modeling the puck as a *particle under a net force* in the horizontal direction: kinetic friction causes the puck to accelerate. There is no acceleration of the puck in the vertical direction, so we use the *particle in equilibrium* model for that direction. Furthermore, because we model the force of kinetic friction as independent of speed, the acceleration of the puck is constant. So, we can also categorize this problem by modeling the puck as a *particle under constant acceleration*.

Analyze First, let's find the acceleration algebraically in terms of the coefficient of kinetic friction, using Newton's second law. Once we know the acceleration of the puck and the distance it travels, the equations of kinematics can be used to find the numerical value of the coefficient of kinetic friction. The diagram in Figure 5.19 shows the forces on the puck.

Apply the particle under a net force model in the x direction to the puck:

$$(1) \quad \sum F_x = -f_k = ma_x$$

Apply the particle in equilibrium model in the y direction to the puck:

$$(2) \quad \sum F_y = n - mg = 0$$

Substitute $n = mg$ from Equation (2) and $f_k = \mu_k n$ into Equation (1):

$$\begin{aligned} -\mu_k n &= -\mu_k mg = ma_x \\ a_x &= -\mu_k g \end{aligned}$$

The negative sign means the acceleration is to the left in Figure 5.19. Because the velocity of the puck is to the right, the puck is slowing down. The acceleration is independent of the mass of the puck and is constant because we assume μ_k remains constant.

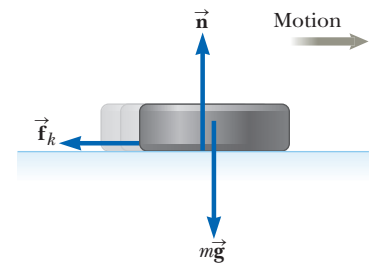


Figure 5.19 (Example 5.12) After the puck is given an initial velocity to the right, the only external forces acting on it are the gravitational force $m\vec{g}$, the normal force \vec{n} , and the force of kinetic friction \vec{f}_k .

continued

5.12 continued

Apply the particle under constant acceleration model to the puck, choosing Equation 2.17 from the model, $v_{xf}^2 = v_{xi}^2 + 2a_x(x_f - x_i)$, with $x_i = 0$ and $v_{xf} = 0$:

Solve for the coefficient of kinetic friction:

Substitute the numerical values:

$$0 = v_{xi}^2 + 2a_x x_f = v_{xi}^2 - 2\mu_k g x_f$$

$$\mu_k = \frac{v_{xi}^2}{2g x_f}$$

$$\mu_k = \frac{(20.0 \text{ m/s})^2}{2(9.80 \text{ m/s}^2)(115 \text{ m})} = 0.177$$

Finalize Notice that μ_k is dimensionless, as it should be, and that it has a low value, consistent with an object sliding on ice.

Example 5.13 Acceleration of Two Connected Objects When Friction Is Present

AM

A block of mass m_2 on a rough, horizontal surface is connected to a ball of mass m_1 by a lightweight cord over a lightweight, frictionless pulley as shown in Figure 5.20a. A force of magnitude F at an angle θ with the horizontal is applied to the block as shown, and the block slides to the right. The coefficient of kinetic friction between the block and surface is μ_k . Determine the magnitude of the acceleration of the two objects.

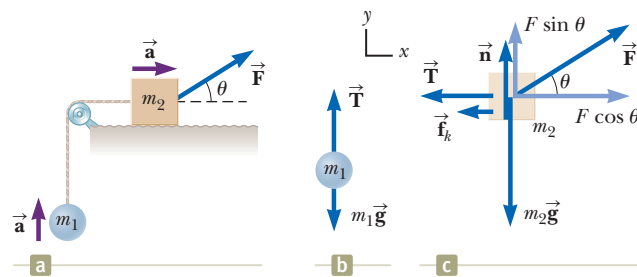


Figure 5.20 (Example 5.13) (a) The external force \vec{F} applied as shown can cause the block to accelerate to the right. (b, c) Diagrams showing the forces on the two objects, assuming the block accelerates to the right and the ball accelerates upward.

SOLUTION

Conceptualize Imagine what happens as \vec{F} is applied to the block. Assuming \vec{F} is large enough to break the block free from static friction but not large enough to lift the block, the block slides to the right and the ball rises.

Categorize We can identify forces and we want an acceleration, so we categorize this problem as one involving two *particles under a net force*, the ball and the block. Because we assume that the block does not rise into the air due to the applied force, we model the block as a *particle in equilibrium* in the vertical direction.

Analyze First draw force diagrams for the two objects as shown in Figures 5.20b and 5.20c. Notice that the string exerts a force of magnitude T on both objects. The applied force \vec{F} has x and y components $F \cos \theta$ and $F \sin \theta$, respectively. Because the two objects are connected, we can equate the magnitudes of the x component of the acceleration of the block and the y component of the acceleration of the ball and call them both a . Let us assume the motion of the block is to the right.

Apply the particle under a net force model to the block in the horizontal direction:

Because the block moves only horizontally, apply the particle in equilibrium model to the block in the vertical direction:

Apply the particle under a net force model to the ball in the vertical direction:

Solve Equation (2) for n :

Substitute n into $f_k = \mu_k n$ from Equation 5.10:

$$(1) \quad \sum F_x = F \cos \theta - f_k - T = m_2 a_x = m_2 a$$

$$(2) \quad \sum F_y = n + F \sin \theta - m_2 g = 0$$

$$(3) \quad \sum F_y = T - m_1 g = m_1 a_y = m_1 a$$

$$n = m_2 g - F \sin \theta$$

$$(4) \quad f_k = \mu_k (m_2 g - F \sin \theta)$$

► 5.13 continued

Substitute Equation (4) and the value of T from Equation (3) into Equation (1):

$$F \cos \theta - \mu_k(m_2g - F \sin \theta) - m_1(a + g) = m_2a$$

Solve for a :

$$(5) \quad a = \frac{F(\cos \theta + \mu_k \sin \theta) - (m_1 + \mu_k m_2)g}{m_1 + m_2}$$

Finalize The acceleration of the block can be either to the right or to the left depending on the sign of the numerator in Equation (5). If the velocity is to the left, we must reverse the sign of f_k in Equation (1) because the force of kinetic friction must oppose the motion of the block relative to the surface. In this case, the value of a is the same as in Equation (5), with the two plus signs in the numerator changed to minus signs.

What does Equation (5) reduce to if the force \vec{F} is removed and the surface becomes frictionless? Call this expression Equation (6). Does this algebraic expression match your intuition about the physical situation in this case? Now go back to Example 5.10 and let angle θ go to zero in Equation (5) of that example. How does the resulting equation compare with your Equation (6) here in Example 5.13? Should the algebraic expressions compare in this way based on the physical situations?

Summary

Definitions

■ An **inertial frame of reference** is a frame in which an object that does not interact with other objects experiences zero acceleration. Any frame moving with constant velocity relative to an inertial frame is also an inertial frame.

■ We define **force** as **that which causes a change in motion of an object**.

Concepts and Principles

■ **Newton's first law** states that it is possible to find an inertial frame in which an object that does not interact with other objects experiences zero acceleration, or, equivalently, in the absence of an external force, when viewed from an inertial frame, an object at rest remains at rest and an object in uniform motion in a straight line maintains that motion.

Newton's second law states that the acceleration of an object is directly proportional to the net force acting on it and inversely proportional to its mass.

Newton's third law states that if two objects interact, the force exerted by object 1 on object 2 is equal in magnitude and opposite in direction to the force exerted by object 2 on object 1.

■ The **gravitational force** exerted on an object is equal to the product of its mass (a scalar quantity) and the free-fall acceleration:

$$\vec{F}_g = m\vec{g} \quad (5.5)$$

The **weight** of an object is the magnitude of the gravitational force acting on the object:

$$F_g = mg \quad (5.6)$$

■ The maximum **force of static friction** $\vec{f}_{s,\max}$ between an object and a surface is proportional to the normal force acting on the object. In general, $f_s \leq \mu_s n$, where μ_s is the **coefficient of static friction** and n is the magnitude of the normal force.

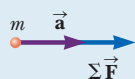
■ When an object slides over a surface, the magnitude of the **force of kinetic friction** \vec{f}_k is given by $f_k = \mu_k n$, where μ_k is the **coefficient of kinetic friction**.

continued

Analysis Models for Problem Solving

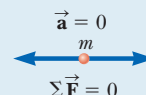
Particle Under a Net Force If a particle of mass m experiences a nonzero net force, its acceleration is related to the net force by Newton's second law:

$$\sum \vec{F} = m\vec{a} \quad (5.2)$$



Particle in Equilibrium If a particle maintains a constant velocity (so that $\vec{a} = 0$), which could include a velocity of zero, the forces on the particle balance and Newton's second law reduces to

$$\sum \vec{F} = 0 \quad (5.8)$$



Objective Questions

1. denotes answer available in *Student Solutions Manual/Study Guide*

- The driver of a speeding empty truck slams on the brakes and skids to a stop through a distance d . On a second trial, the truck carries a load that doubles its mass. What will now be the truck's "skidding distance"? (a) $4d$ (b) $2d$ (c) $\sqrt{2}d$ (d) d (e) $d/2$
- In Figure OQ5.2, a locomotive has broken through the wall of a train station. During the collision, what can be said about the force exerted by the locomotive on the wall? (a) The force exerted by the locomotive on the wall was larger than the force the wall could exert on the locomotive. (b) The force exerted by the locomotive on the wall was the same in magnitude as the force exerted by the wall on the locomotive. (c) The force exerted by the locomotive on the wall was less than the force exerted by the wall on the locomotive. (d) The wall cannot be said to "exert" a force; after all, it broke. (e) $d/4$



Figure OQ5.2

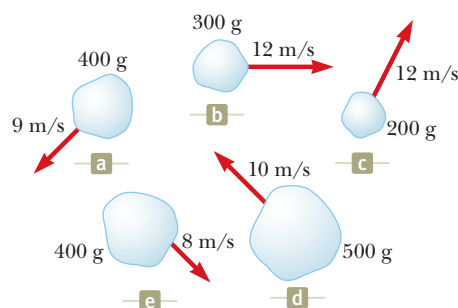


Figure OQ5.3

- The third graders are on one side of a schoolyard, and the fourth graders are on the other. They are throwing snowballs at each other. Between them, snowballs of various masses are moving with different velocities as shown in Figure OQ5.3. Rank the snowballs (a) through (e) according to the magnitude of the total force exerted on each one. Ignore air resistance. If two snowballs rank together, make that fact clear.
- The driver of a speeding truck slams on the brakes and skids to a stop through a distance d . On another trial, the initial speed of the truck is half as large. What now will be the truck's skidding distance? (a) $2d$ (b) $\sqrt{2}d$ (c) d (d) $d/2$ (e) $d/4$
- An experiment is performed on a puck on a level air hockey table, where friction is negligible. A constant horizontal force is applied to the puck, and the puck's acceleration is measured. Now the same puck is transported far into outer space, where both friction and gravity are negligible. The same constant force is applied to the puck (through a spring scale that stretches the same amount), and the puck's acceleration (relative to the distant stars) is measured. What is the puck's acceleration in outer space? (a) It is somewhat greater than its acceleration on the Earth. (b) It is the same as its acceleration on the Earth. (c) It is less than its acceleration on the Earth. (d) It is infinite because neither friction nor gravity constrains it. (e) It is very large because acceleration is inversely proportional to weight and the puck's weight is very small but not zero.
- The manager of a department store is pushing horizontally with a force of magnitude 200 N on a box of shirts. The box is sliding across the horizontal floor with a forward acceleration. Nothing else touches the box. What must be true about the magnitude of the force of kinetic friction acting on the box (choose one)? (a) It is greater than 200 N. (b) It is less than 200 N. (c) It is equal to 200 N. (d) None of those statements is necessarily true.

7. Two objects are connected by a string that passes over a frictionless pulley as in Figure 5.14a, where $m_1 < m_2$ and a_1 and a_2 are the magnitudes of the respective accelerations. Which mathematical statement is true regarding the magnitude of the acceleration a_2 of the mass m_2 ? (a) $a_2 < g$ (b) $a_2 > g$ (c) $a_2 = g$ (d) $a_2 < a_1$ (e) $a_2 > a_1$
8. An object of mass m is sliding with speed v_i at some instant across a level tabletop, with which its coefficient of kinetic friction is μ . It then moves through a distance d and comes to rest. Which of the following equations for the speed v_i is reasonable? (a) $v_i = \sqrt{-2\mu mgd}$ (b) $v_i = \sqrt{2\mu mgd}$ (c) $v_i = \sqrt{-2\mu gd}$ (d) $v_i = \sqrt{2\mu gd}$ (e) $v_i = \sqrt{2\mu d}$
9. A truck loaded with sand accelerates along a highway. The driving force on the truck remains constant. What happens to the acceleration of the truck if its trailer leaks sand at a constant rate through a hole in its bottom? (a) It decreases at a steady rate. (b) It increases at a steady rate. (c) It increases and then decreases. (d) It decreases and then increases. (e) It remains constant.
10. A large crate of mass m is placed on the flatbed of a truck but not tied down. As the truck accelerates forward with acceleration a , the crate remains at rest relative to the truck. What force causes the crate to accelerate? (a) the normal force (b) the gravitational force (c) the friction force (d) the ma force exerted by the crate (e) No force is required.
11. If an object is in equilibrium, which of the following statements is *not* true? (a) The speed of the object remains constant. (b) The acceleration of the object is zero. (c) The net force acting on the object is zero. (d) The object must be at rest. (e) There are at least two forces acting on the object.
12. A crate remains stationary after it has been placed on a ramp inclined at an angle with the horizontal. Which of the following statements is or are correct about the magnitude of the friction force that acts on the crate? Choose all that are true. (a) It is larger than the weight of the crate. (b) It is equal to μ_n . (c) It is greater than the component of the gravitational force acting down the ramp. (d) It is equal to the component of the gravitational force acting down the ramp. (e) It is less than the component of the gravitational force acting down the ramp.
13. An object of mass m moves with acceleration \vec{a} down a rough incline. Which of the following forces should appear in a free-body diagram of the object? Choose all correct answers. (a) the gravitational force exerted by the planet (b) $m\vec{a}$ in the direction of motion (c) the normal force exerted by the incline (d) the friction force exerted by the incline (e) the force exerted by the object on the incline

Conceptual Questions

1. denotes answer available in *Student Solutions Manual/Study Guide*

1. If you hold a horizontal metal bar several centimeters above the ground and move it through grass, each leaf of grass bends out of the way. If you increase the speed of the bar, each leaf of grass will bend more quickly. How then does a rotary power lawn mower manage to cut grass? How can it exert enough force on a leaf of grass to shear it off?
2. Your hands are wet, and the restroom towel dispenser is empty. What do you do to get drops of water off your hands? How does the motion of the drops exemplify one of Newton's laws? Which one?
3. In the motion picture *It Happened One Night* (Columbia Pictures, 1934), Clark Gable is standing inside a stationary bus in front of Claudette Colbert, who is seated. The bus suddenly starts moving forward and Clark falls into Claudette's lap. Why did this happen?
4. If a car is traveling due westward with a constant speed of 20 m/s, what is the resultant force acting on it?
5. A passenger sitting in the rear of a bus claims that she was injured when the driver slammed on the brakes, causing a suitcase to come flying toward her from the front of the bus. If you were the judge in this case, what disposition would you make? Why?
6. A child tosses a ball straight up. She says that the ball is moving away from her hand because the ball feels an upward "force of the throw" as well as the gravitational force. (a) Can the "force of the throw" exceed the gravitational force? How would the ball move if it did? (b) Can the "force of the throw" be equal in magnitude to the gravitational force? Explain. (c) What strength can accurately be attributed to the "force of the throw"? Explain. (d) Why does the ball move away from the child's hand?
7. A person holds a ball in her hand. (a) Identify all the external forces acting on the ball and the Newton's third-law reaction force to each one. (b) If the ball is dropped, what force is exerted on it while it is falling? Identify the reaction force in this case. (Ignore air resistance.)
8. A spherical rubber balloon inflated with air is held stationary, with its opening, on the west side, pinched shut. (a) Describe the forces exerted by the air inside and outside the balloon on sections of the rubber. (b) After the balloon is released, it takes off toward the east, gaining speed rapidly. Explain this motion in terms of the forces now acting on the rubber. (c) Account for the motion of a skyrocket taking off from its launch pad.
9. A rubber ball is dropped onto the floor. What force causes the ball to bounce?
10. Twenty people participate in a tug-of-war. The two teams of ten people are so evenly matched that neither team wins. After the game they notice that a car is stuck in the mud. They attach the tug-of-war rope to the bumper of the car, and all the people pull on the

rope. The heavy car has just moved a couple of decimeters when the rope breaks. Why did the rope break in this situation when it did not break when the same twenty people pulled on it in a tug-of-war?

11. Can an object exert a force on itself? Argue for your answer.
12. When you push on a box with a 200-N force instead of a 50-N force, you can feel that you are making a greater effort. When a table exerts a 200-N normal force instead of one of smaller magnitude, is the table really doing anything differently?
13. A weightlifter stands on a bathroom scale. He pumps a barbell up and down. What happens to the reading on the scale as he does so? **What If?** What if he is strong enough to actually *throw* the barbell upward? How does the reading on the scale vary now?
14. An athlete grips a light rope that passes over a low-friction pulley attached to the ceiling of a gym. A sack of sand precisely equal in weight to the athlete is tied to the other end of the rope. Both the sand and the athlete are initially at rest. The athlete climbs the rope, sometimes speeding up and slowing down as he does so. What happens to the sack of sand? Explain.
15. Suppose you are driving a classic car. Why should you avoid slamming on your brakes when you want to stop in the shortest possible distance? (Many modern cars have antilock brakes that avoid this problem.)

16. In Figure CQ5.16, the light, taut, unstretchable cord B joins block 1 and the larger-mass block 2. Cord A exerts a force on block 1 to make it accelerate forward. (a) How does the magnitude of the force exerted by cord A on block 1 compare with the magnitude of the force exerted by cord B on block 2? Is it larger, smaller, or equal? (b) How does the acceleration of block 1 compare with the acceleration (if any) of block 2? (c) Does cord B exert a force on block 1? If so, is it forward or backward? Is it larger, smaller, or equal in magnitude to the force exerted by cord B on block 2?

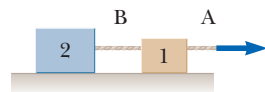


Figure CQ5.16

17. Describe two examples in which the force of friction exerted on an object is in the direction of motion of the object.
18. The mayor of a city reprimands some city employees because they will not remove the obvious sags from the cables that support the city traffic lights. What explanation can the employees give? How do you think the case will be settled in mediation?
19. Give reasons for the answers to each of the following questions: (a) Can a normal force be horizontal? (b) Can a normal force be directed vertically downward? (c) Consider a tennis ball in contact with a stationary floor and with nothing else. Can the normal force be different in magnitude from the gravitational force exerted on the ball? (d) Can the force exerted by the

floor on the ball be different in magnitude from the force the ball exerts on the floor?

20. Balancing carefully, three boys inch out onto a horizontal tree branch above a pond, each planning to dive in separately. The third boy in line notices that the branch is barely strong enough to support them. He decides to jump straight up and land back on the branch to break it, spilling all three into the pond. When he starts to carry out his plan, at what precise moment does the branch break? Explain. *Suggestion:* Pretend to be the third boy and imitate what he does in slow motion. If you are still unsure, stand on a bathroom scale and repeat the suggestion.
21. Identify action–reaction pairs in the following situations: (a) a man takes a step (b) a snowball hits a girl in the back (c) a baseball player catches a ball (d) a gust of wind strikes a window
22. As shown in Figure CQ5.22, student A, a 55-kg girl, sits on one chair with metal runners, at rest on a classroom floor. Student B, an 80-kg boy, sits on an identical chair. Both students keep their feet off the floor. A rope runs from student A's hands around a light pulley and then over her shoulder to the hands of a teacher standing on the floor behind her. The low-friction axle of the pulley is attached to a second rope held by student B. All ropes run parallel to the chair runners. (a) If student A pulls on her end of the rope, will her chair or will B's chair slide on the floor? Explain why. (b) If instead the teacher pulls on his rope end, which chair slides? Why this one? (c) If student B pulls on his rope, which chair slides? Why? (d) Now the teacher ties his end of the rope to student A's chair. Student A pulls on the end of the rope in her hands. Which chair slides and why?

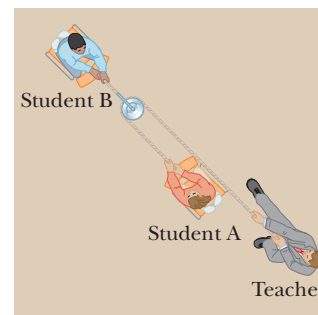


Figure CQ5.22

23. A car is moving forward slowly and is speeding up. A student claims that “the car exerts a force on itself” or that “the car’s engine exerts a force on the car.” (a) Argue that this idea cannot be accurate and that friction exerted by the road is the propulsive force on the car. Make your evidence and reasoning as persuasive as possible. (b) Is it static or kinetic friction? *Suggestions:* Consider a road covered with light gravel. Consider a sharp print of the tire tread on an asphalt road, obtained by coating the tread with dust.

Problems

WebAssign

The problems found in this chapter may be assigned online in Enhanced WebAssign

1. straightforward;
2. intermediate;
3. challenging

1. full solution available in the *Student Solutions Manual/Study Guide*

AMT Analysis Model tutorial available in Enhanced WebAssign

GP Guided Problem

M Master It tutorial available in Enhanced WebAssign

W Watch It video solution available in Enhanced WebAssign

Section 5.1 The Concept of Force

Section 5.2 Newton's First Law and Inertial Frames

Section 5.3 Mass

Section 5.4 Newton's Second Law

Section 5.5 The Gravitational Force and Weight

Section 5.6 Newton's Third Law

1. A woman weighs 120 lb. Determine (a) her weight in newtons and (b) her mass in kilograms.
2. If a man weighs 900 N on the Earth, what would he weigh on Jupiter, where the free-fall acceleration is 25.9 m/s^2 ?
3. A 3.00-kg object undergoes an acceleration given by $\vec{a} = (2.00\hat{i} + 5.00\hat{j}) \text{ m/s}^2$. Find (a) the resultant force acting on the object and (b) the magnitude of the resultant force.
4. A certain orthodontist uses a wire brace to align a patient's crooked tooth as in Figure P5.4. The tension in the wire is adjusted to have a magnitude of 18.0 N. Find the magnitude of the net force exerted by the wire on the crooked tooth.

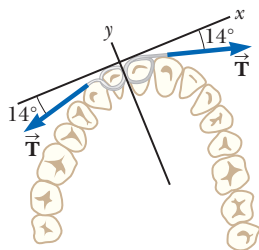


Figure P5.4

5. A toy rocket engine is securely fastened to a large puck that can glide with negligible friction over a horizontal surface, taken as the xy plane. The 4.00-kg puck has a velocity of $3.00\hat{i} \text{ m/s}$ at one instant. Eight seconds later, its velocity is $(8.00\hat{i} + 10.00\hat{j}) \text{ m/s}$. Assuming the rocket engine exerts a constant horizontal force, find (a) the components of the force and (b) its magnitude.
6. The average speed of a nitrogen molecule in air is about $6.70 \times 10^2 \text{ m/s}$, and its mass is $4.68 \times 10^{-26} \text{ kg}$. (a) If it takes $3.00 \times 10^{-13} \text{ s}$ for a nitrogen molecule to hit a wall and rebound with the same speed but moving in the opposite direction, what is the average acceleration of the molecule during this time interval? (b) What average force does the molecule exert on the wall?
7. The distinction between mass and weight was discovered after Jean Richer transported pendulum clocks from Paris, France, to Cayenne, French Guiana, in 1671. He found that they quite systematically ran slower in Cayenne than in Paris. The effect was reversed when the clocks returned to Paris. How much weight would a 90.0 kg person lose in traveling from Paris, where $g = 9.8095 \text{ m/s}^2$, to Cayenne, where $g = 9.7808 \text{ m/s}^2$? (We will consider how the free-fall acceleration influences the period of a pendulum in Section 15.5.)
8. (a) A car with a mass of 850 kg is moving to the right with a constant speed of 1.44 m/s. What is the total force on the car? (b) What is the total force on the car if it is moving to the left?
9. **Review.** The gravitational force exerted on a baseball is 2.21 N down. A pitcher throws the ball horizontally with velocity 18.0 m/s by uniformly accelerating it along a straight horizontal line for a time interval of 170 ms. The ball starts from rest. (a) Through what distance does it move before its release? (b) What are the magnitude and direction of the force the pitcher exerts on the ball?
10. **Review.** The gravitational force exerted on a baseball is $-F_g\hat{j}$. A pitcher throws the ball with velocity $v\hat{i}$ by uniformly accelerating it along a straight horizontal line for a time interval of $\Delta t = t - 0 = t$. (a) Starting from rest, through what distance does the ball move before its release? (b) What force does the pitcher exert on the ball?
11. **Review.** An electron of mass $9.11 \times 10^{-31} \text{ kg}$ has an initial speed of $3.00 \times 10^5 \text{ m/s}$. It travels in a straight line, and its speed increases to $7.00 \times 10^5 \text{ m/s}$ in a distance of 5.00 cm. Assuming its acceleration is constant, (a) determine the magnitude of the force exerted on the electron and (b) compare this force with the weight of the electron, which we ignored.
12. Besides the gravitational force, a 2.80-kg object is subjected to one other constant force. The object starts from rest and in 1.20 s experiences a displacement of $(4.20\hat{i} - 3.30\hat{j}) \text{ m}$, where the direction of \hat{j} is the upward vertical direction. Determine the other force.

13. One or more external forces, large enough to be easily measured, are exerted on each object enclosed in a dashed box shown in Figure 5.1. Identify the reaction to each of these forces.
14. A brick of mass M has been placed on a rubber cushion of mass m . Together they are sliding to the right at constant velocity on an ice-covered parking lot. (a) Draw a free-body diagram of the brick and identify each force acting on it. (b) Draw a free-body diagram of the cushion and identify each force acting on it. (c) Identify all of the action–reaction pairs of forces in the brick–cushion–planet system.
15. Two forces, $\vec{F}_1 = (-6.00\hat{i} - 4.00\hat{j})$ N and $\vec{F}_2 = (-3.00\hat{i} + 7.00\hat{j})$ N, act on a particle of mass 2.00 kg that is initially at rest at coordinates $(-2.00$ m, $+4.00$ m). (a) What are the components of the particle's velocity at $t = 10.0$ s? (b) In what direction is the particle moving at $t = 10.0$ s? (c) What displacement does the particle undergo during the first 10.0 s? (d) What are the coordinates of the particle at $t = 10.0$ s?
16. **M** The force exerted by the wind on the sails of a sailboat is 390 N north. The water exerts a force of 180 N east. If the boat (including its crew) has a mass of 270 kg, what are the magnitude and direction of its acceleration?
17. An object of mass m is dropped at $t = 0$ from the roof of a building of height h . While the object is falling, a wind blowing parallel to the face of the building exerts a constant horizontal force F on the object. (a) At what time t does the object strike the ground? Express t in terms of g and h . (b) Find an expression in terms of m and F for the acceleration a_x of the object in the horizontal direction (taken as the positive x direction). (c) How far is the object displaced horizontally before hitting the ground? Answer in terms of m , g , F , and h . (d) Find the magnitude of the object's acceleration while it is falling, using the variables F , m , and g .
18. **W** A force \vec{F} applied to an object of mass m_1 produces an acceleration of 3.00 m/s². The same force applied to a second object of mass m_2 produces an acceleration of 1.00 m/s². (a) What is the value of the ratio m_1/m_2 ? (b) If m_1 and m_2 are combined into one object, find its acceleration under the action of the force \vec{F} .
19. **M** Two forces \vec{F}_1 and \vec{F}_2 act on a 5.00-kg object. Taking $F_1 = 20.0$ N and $F_2 = 15.0$ N, find the accelerations of the object for the configurations of forces shown in parts (a) and (b) of Figure P5.19.

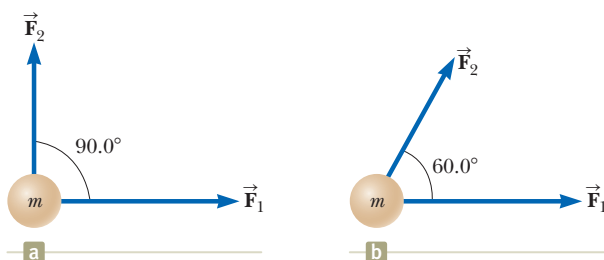


Figure P5.19

20. You stand on the seat of a chair and then hop off. (a) During the time interval you are in flight down to the floor, the Earth moves toward you with an acceleration of what order of magnitude? In your solution, explain your logic. Model the Earth as a perfectly solid object. (b) The Earth moves toward you through a distance of what order of magnitude?
21. A 15.0-lb block rests on the floor. (a) What force does the floor exert on the block? (b) A rope is tied to the block and is run vertically over a pulley. The other end is attached to a free-hanging 10.0-lb object. What now is the force exerted by the floor on the 15.0-lb block? (c) If the 10.0-lb object in part (b) is replaced with a 20.0-lb object, what is the force exerted by the floor on the 15.0-lb block?
22. **Review.** Three forces acting on an object are given by $\vec{F}_1 = (-2.00\hat{i} + 2.00\hat{j})$ N, and $\vec{F}_2 = (5.00\hat{i} - 3.00\hat{j})$ N, and $\vec{F}_3 = (-45.0\hat{i})$ N. The object experiences an acceleration of magnitude 3.75 m/s². (a) What is the direction of the acceleration? (b) What is the mass of the object? (c) If the object is initially at rest, what is its speed after 10.0 s? (d) What are the velocity components of the object after 10.0 s?
23. **W** A 1 000-kg car is pulling a 300-kg trailer. Together, the car and trailer move forward with an acceleration of 2.15 m/s². Ignore any force of air drag on the car and all friction forces on the trailer. Determine (a) the net force on the car, (b) the net force on the trailer, (c) the force exerted by the trailer on the car, and (d) the resultant force exerted by the car on the road.
24. If a single constant force acts on an object that moves on a straight line, the object's velocity is a linear function of time. The equation $v = v_i + at$ gives its velocity v as a function of time, where a is its constant acceleration. What if velocity is instead a linear function of position? Assume that as a particular object moves through a resistive medium, its speed decreases as described by the equation $v = v_i - kx$, where k is a constant coefficient and x is the position of the object. Find the law describing the total force acting on this object.

Section 5.7 Analysis Models Using Newton's Second Law

25. **Review.** Figure P5.25 shows a worker poling a boat—a very efficient mode of transportation—across a shallow lake. He pushes parallel to the length of the light pole, exerting a force of magnitude 240 N on the bottom of the lake. Assume the pole lies in the vertical plane containing the keel of the boat. At one moment, the pole makes an angle of 35.0° with the vertical and the water exerts a horizontal drag force of 47.5 N on the boat, opposite to its forward velocity of magnitude 0.857 m/s. The mass of the boat including its cargo and the worker is 370 kg. (a) The water exerts



Figure P5.25

AP Photo/Rebecca Blackwell

a buoyant force vertically upward on the boat. Find the magnitude of this force. (b) Model the forces as constant over a short interval of time to find the velocity of the boat 0.450 s after the moment described.

26. An iron bolt of mass 65.0 g hangs from a string 35.7 cm long. The top end of the string is fixed. Without touching it, a magnet attracts the bolt so that it remains stationary, but is displaced horizontally 28.0 cm to the right from the previously vertical line of the string. The magnet is located to the right of the bolt and on the same vertical level as the bolt in the final configuration. (a) Draw a free-body diagram of the bolt. (b) Find the tension in the string. (c) Find the magnetic force on the bolt.

27. Figure P5.27 shows the horizontal forces acting on a sailboat moving north at constant velocity, seen from a point straight above its mast. At the particular speed of the sailboat, the water exerts a 220-N drag force on its hull and $\theta = 40.0^\circ$. For each of the situations (a) and (b) described below, write two component equations representing Newton's second law. Then solve the equations for P (the force exerted by the wind on the sail) and for n (the force exerted by the water on the keel). (a) Choose the x direction as east and the y direction as north. (b) Now choose the x direction as $\theta = 40.0^\circ$ north of east and the y direction as $\theta = 40.0^\circ$ west of north. (c) Compare your solutions to parts (a) and (b). Do the results agree? Is one method significantly easier?

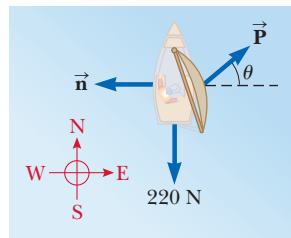


Figure P5.27

28. The systems shown in Figure P5.28 are in equilibrium. **W** If the spring scales are calibrated in newtons, what do they read? Ignore the masses of the pulleys and strings and assume the pulleys and the incline in Figure P5.28d are frictionless.

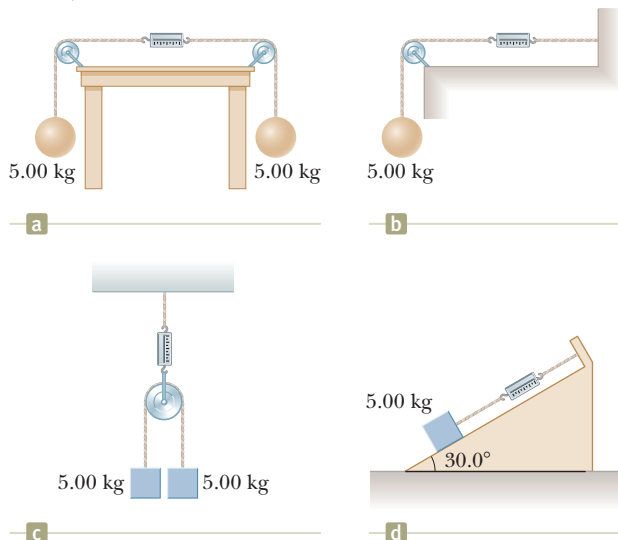


Figure P5.28

29. Assume the three blocks portrayed in Figure P5.29 **M** move on a frictionless surface and a 42-N force acts as shown on the 3.0-kg block. Determine (a) the acceleration given this system, (b) the tension in the cord connecting the 3.0-kg and the 1.0-kg blocks, and (c) the force exerted by the 1.0-kg block on the 2.0-kg block.

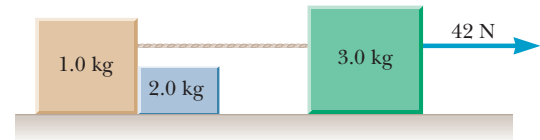


Figure P5.29

30. A block slides down a frictionless plane having an inclination of $\theta = 15.0^\circ$. The block starts from rest at the top, and the length of the incline is 2.00 m. (a) Draw a free-body diagram of the block. Find (b) the acceleration of the block and (c) its speed when it reaches the bottom of the incline.

31. The distance between two telephone poles is 50.0 m. When a 1.00-kg bird lands on the telephone wire midway between the poles, the wire sags 0.200 m. (a) Draw a free-body diagram of the bird. (b) How much tension does the bird produce in the wire? Ignore the weight of the wire.

32. A 3.00-kg object is moving in a plane, with its x and y **W** coordinates given by $x = 5t^2 - 1$ and $y = 3t^3 + 2$, where x and y are in meters and t is in seconds. Find the magnitude of the net force acting on this object at $t = 2.00$ s.

33. A bag of cement weighing 325 N **AMT** hangs in equilibrium from **W** three wires as suggested in Figure P5.33. Two of the wires make angles $\theta_1 = 60.0^\circ$ and $\theta_2 = 40.0^\circ$ with the horizontal. Assuming the system is in equilibrium, find the tensions T_1 , T_2 , and T_3 in the wires.

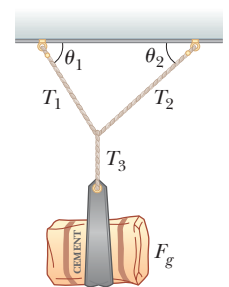


Figure P5.33

Problems 33 and 34.

34. A bag of cement whose weight is F_g hangs in equilibrium from three wires as shown in Figure P5.33. Two of the wires make angles θ_1 and θ_2 with the horizontal. Assuming the system is in equilibrium, show that the tension in the left-hand wire is

$$T_1 = \frac{F_g \cos \theta_2}{\sin(\theta_1 + \theta_2)}$$

35. Two people pull as hard as they can on horizontal ropes attached to a boat that has a mass of 200 kg. If they pull in the same direction, the boat has an acceleration of 1.52 m/s^2 to the right. If they pull in opposite directions, the boat has an acceleration of 0.518 m/s^2 to the left. What is the magnitude of the force each person exerts on the boat? Disregard any other horizontal forces on the boat.

36. Figure P5.36 shows loads hanging from the ceiling of an elevator that is moving at constant velocity. Find the tension in each of the three strands of cord supporting each load.

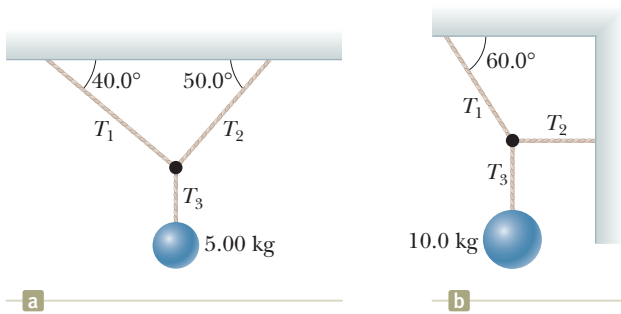


Figure P5.36

37. An object of mass $m = 1.00$ kg is observed to have an acceleration \vec{a} with a magnitude of 10.0 m/s² in a direction 60.0° east of north. Figure P5.37 shows a view of the object from above. The force \vec{F}_2 acting on the object has a magnitude of 5.00 N and is directed north. Determine the magnitude and direction of the one other horizontal force \vec{F}_1 acting on the object.

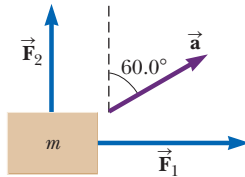


Figure P5.37

38. A setup similar to the one shown in Figure P5.38 is often used in hospitals to support and apply a horizontal traction force to an injured leg. (a) Determine the force of tension in the rope supporting the leg. (b) What is the traction force exerted to the right on the leg?

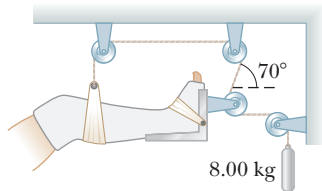


Figure P5.38

39. A simple accelerometer is constructed inside a car by suspending an object of mass m from a string of length L that is tied to the car's ceiling. As the car accelerates the string-object system makes a constant angle of θ with the vertical. (a) Assuming that the string mass is negligible compared with m , derive an expression for the car's acceleration in terms of θ and show that it is independent of the mass m and the length L . (b) Determine the acceleration of the car when $\theta = 23.0^\circ$.

40. An object of mass $m_1 = 5.00$ kg placed on a frictionless, horizontal table is connected to a string that passes over a pulley and then is fastened to a hanging object of mass $m_2 = 9.00$ kg as shown in Figure P5.40. (a) Draw free-body

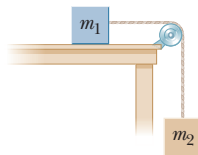


Figure P5.40
Problems 40, 63, and 87.

diagrams of both objects. Find (b) the magnitude of the acceleration of the objects and (c) the tension in the string.

41. Figure P5.41 shows the speed of a person's body as he does a chin-up. Assume the motion is vertical and the mass of the person's body is 64.0 kg. Determine the force exerted by the chin-up bar on his body at (a) $t = 0$, (b) $t = 0.5$ s, (c) $t = 1.1$ s, and (d) $t = 1.6$ s.

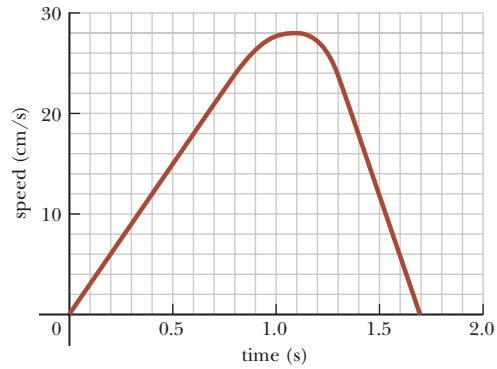


Figure P5.41

42. Two objects are connected by a light string that passes over a frictionless pulley as shown in Figure P5.42. Assume the incline is frictionless and take $m_1 = 2.00$ kg, $m_2 = 6.00$ kg, and $\theta = 55.0^\circ$. (a) Draw free-body diagrams of both objects. Find (b) the magnitude of the acceleration of the objects, (c) the tension in the string, and (d) the speed of each object 2.00 s after it is released from rest.

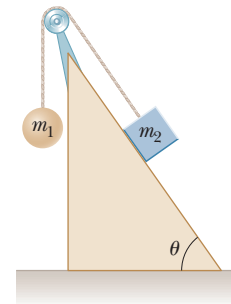


Figure P5.42

43. Two blocks, each of mass $m = 3.50$ kg, are hung from the ceiling of an elevator as in Figure P5.43. (a) If the elevator moves with an upward acceleration \vec{a} of magnitude 1.60 m/s², find the tensions T_1 and T_2 in the upper and lower strings. (b) If the strings can withstand a maximum tension of 85.0 N, what maximum acceleration can the elevator have before a string breaks?

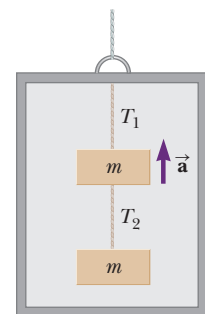


Figure P5.43
Problems 43 and 44.

44. Two blocks, each of mass m , are hung from the ceiling of an elevator as in Figure P5.43. The elevator has an upward acceleration a . The strings have negligible mass. (a) Find the tensions T_1 and T_2 in the upper and lower strings in terms of m , a , and g . (b) Compare the two tensions and determine which string would break first if a is made sufficiently large. (c) What are the tensions if the cable supporting the elevator breaks?

45. In the system shown in Figure P5.45, a horizontal force \vec{F}_x acts on an object of mass $m_2 = 8.00$ kg. The hori-

horizontal surface is frictionless. Consider the acceleration of the sliding object as a function of F_x . (a) For what values of F_x does the object of mass $m_1 = 2.00$ kg accelerate upward? (b) For what values of F_x is the tension in the cord zero? (c) Plot the acceleration of the m_2 object versus F_x . Include values of F_x from -100 N to $+100$ N.

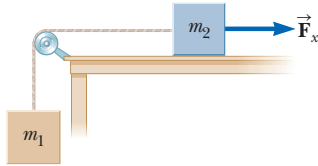


Figure P5.45

46. An object of mass m_1 hangs from a string that passes over a very light fixed pulley P_1 as shown in Figure P5.46. The string connects to a second very light pulley P_2 . A second string passes around this pulley with one end attached to a wall and the other to an object of mass m_2 on a frictionless, horizontal table. (a) If a_1 and a_2 are the accelerations of m_1 and m_2 , respectively, what is the relation between these accelerations? Find expressions for (b) the tensions in the strings and (c) the accelerations a_1 and a_2 in terms of the masses m_1 and m_2 , and g .

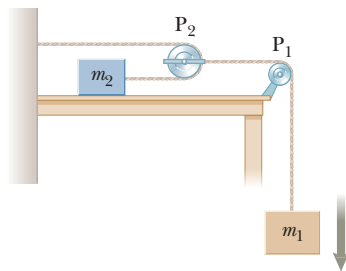


Figure P5.46

47. A block is given an initial velocity of 5.00 m/s up a frictionless incline of angle $\theta = 20.0^\circ$ (Fig. P5.47). How far up the incline does the block slide before coming to rest?

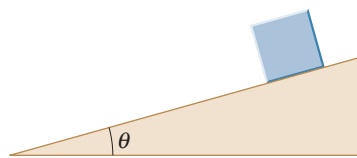


Figure P5.47

48. A car is stuck in the mud. A tow truck pulls on the car with the arrangement shown in Fig. P5.48. The tow cable is under a tension of $2\,500$ N and pulls downward and to the left on the pin at its upper end. The light pin is held in equilibrium by forces exerted by the two bars A and B. Each bar is a *strut*; that is, each is a bar whose weight is small compared to the forces it exerts and which exerts forces only through hinge pins at its ends. Each strut exerts a force directed parallel to its length. Determine the force of tension or compression in each strut. Proceed as follows. Make a guess as to which way (pushing or pulling) each force

acts on the top pin. Draw a free-body diagram of the pin. Use the condition for equilibrium of the pin to translate the free-body diagram into equations. From the equations calculate the forces exerted by struts A and B. If you obtain a positive answer, you correctly guessed the direction of the force. A negative answer means that the direction should be reversed, but the absolute value correctly gives the magnitude of the force. If a strut pulls on a pin, it is in tension. If it pushes, the strut is in compression. Identify whether each strut is in tension or in compression.

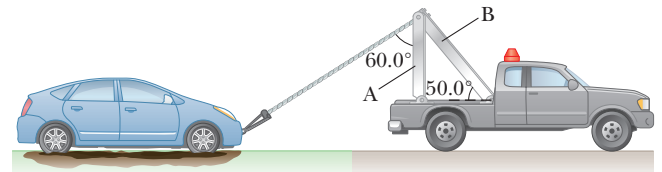


Figure P5.48

49. Two blocks of mass 3.50 kg and 8.00 kg are connected by a massless string that passes over a frictionless pulley (Fig. P5.49). The inclines are frictionless. Find (a) the magnitude of the acceleration of each block and (b) the tension in the string.

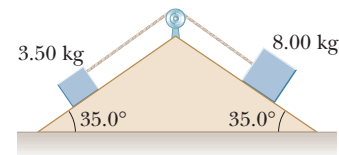


Figure P5.49 Problems 49 and 71.

50. In the Atwood machine discussed in Example 5.9 and shown in Figure 5.14a, $m_1 = 2.00$ kg and $m_2 = 7.00$ kg. The masses of the pulley and string are negligible by comparison. The pulley turns without friction, and the string does not stretch. The lighter object is released with a sharp push that sets it into motion at $v_i = 2.40$ m/s downward. (a) How far will m_1 descend below its initial level? (b) Find the velocity of m_1 after 1.80 s.

51. In Example 5.8, we investigated the apparent weight of a fish in an elevator. Now consider a 72.0 -kg man standing on a spring scale in an elevator. Starting from rest, the elevator ascends, attaining its maximum speed of 1.20 m/s in 0.800 s. It travels with this constant speed for the next 5.00 s. The elevator then undergoes a uniform acceleration in the negative y direction for 1.50 s and comes to rest. What does the spring scale register (a) before the elevator starts to move, (b) during the first 0.800 s, (c) while the elevator is traveling at constant speed, and (d) during the time interval it is slowing down?

Section 5.8 Forces of Friction

52. Consider a large truck carrying a heavy load, such as steel beams. A significant hazard for the driver is that the load may slide forward, crushing the cab, if the truck stops suddenly in an accident or even in braking. Assume, for example, that a $10\,000$ -kg load sits on the

flatbed of a 20 000-kg truck moving at 12.0 m/s. Assume that the load is not tied down to the truck, but has a coefficient of friction of 0.500 with the flatbed of the truck. (a) Calculate the minimum stopping distance for which the load will not slide forward relative to the truck. (b) Is any piece of data unnecessary for the solution?

- 53. Review.** A rifle bullet with a mass of 12.0 g traveling toward the right at 260 m/s strikes a large bag of sand and penetrates it to a depth of 23.0 cm. Determine the magnitude and direction of the friction force (assumed constant) that acts on the bullet.
- 54. Review.** A car is traveling at 50.0 mi/h on a horizontal highway. (a) If the coefficient of static friction between road and tires on a rainy day is 0.100, what is the minimum distance in which the car will stop? (b) What is the stopping distance when the surface is dry and $\mu_s = 0.600$?
- 55. W** A 25.0-kg block is initially at rest on a horizontal surface. A horizontal force of 75.0 N is required to set the block in motion, after which a horizontal force of 60.0 N is required to keep the block moving with constant speed. Find (a) the coefficient of static friction and (b) the coefficient of kinetic friction between the block and the surface.
- 56.** Why is the following situation impossible? Your 3.80-kg physics book is placed next to you on the horizontal seat of your car. The coefficient of static friction between the book and the seat is 0.650, and the coefficient of kinetic friction is 0.550. You are traveling forward at 72.0 km/h and brake to a stop with constant acceleration over a distance of 30.0 m. Your physics book remains on the seat rather than sliding forward onto the floor.
- 57.** To determine the coefficients of friction between rubber and various surfaces, a student uses a rubber eraser and an incline. In one experiment, the eraser begins to slip down the incline when the angle of inclination is 36.0° and then moves down the incline with constant speed when the angle is reduced to 30.0° . From these data, determine the coefficients of static and kinetic friction for this experiment.
- 58.** Before 1960, people believed that the maximum attainable coefficient of static friction for an automobile tire on a roadway was $\mu_s = 1$. Around 1962, three companies independently developed racing tires with coefficients of 1.6. This problem shows that tires have improved further since then. The shortest time interval in which a piston-engine car initially at rest has covered a distance of one-quarter mile is about 4.43 s. (a) Assume the car's rear wheels lift the front wheels off the pavement as shown in Figure P5.58. What mini-



Figure P5.58

imum value of μ_s is necessary to achieve the record time? (b) Suppose the driver were able to increase his or her engine power, keeping other things equal. How would this change affect the elapsed time?

- 59.** To meet a U.S. Postal Service requirement, employees' footwear must have a coefficient of static friction of 0.5 or more on a specified tile surface. A typical athletic shoe has a coefficient of static friction of 0.800. In an emergency, what is the minimum time interval in which a person starting from rest can move 3.00 m on the tile surface if she is wearing (a) footwear meeting the Postal Service minimum and (b) a typical athletic shoe?
- 60. W** A woman at an airport is towing her 20.0-kg suitcase at constant speed by pulling on a strap at an angle θ above the horizontal (Fig. P5.60). She pulls on the strap with a 35.0-N force, and the friction force on the suitcase is 20.0 N. (a) Draw a free-body diagram of the suitcase. (b) What angle does the strap make with the horizontal? (c) What is the magnitude of the normal force that the ground exerts on the suitcase?




Figure P5.60

- 61. M** Review. A 3.00-kg block starts from rest at the top of a 30.0° incline and slides a distance of 2.00 m down the incline in 1.50 s. Find (a) the magnitude of the acceleration of the block, (b) the coefficient of kinetic friction between block and plane, (c) the friction force acting on the block, and (d) the speed of the block after it has slid 2.00 m.
- 62.** The person in Figure P5.62 weighs 170 lb. As seen from the front, each light crutch makes an angle of 22.0° with the vertical. Half of the person's weight is supported by the crutches. The other half is supported by the vertical forces of the ground on the person's feet. Assuming that the person is moving with constant velocity and the force exerted by the ground on the crutches acts along the crutches, determine (a) the smallest possible coefficient of friction between crutches and ground and (b) the magnitude of the compression force in each crutch.

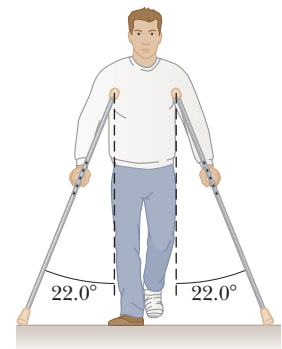


Figure P5.62

- 63. W** A 9.00-kg hanging object is connected by a light, inextensible cord over a light, frictionless pulley to a 5.00-kg block that is sliding on a flat table (Fig. P5.40). Taking the coefficient of kinetic friction as 0.200, find the tension in the string.
- 64.** Three objects are connected on a table as shown in Figure P5.64. The coefficient of kinetic friction between the block of mass m_2 and the table is 0.350. The objects have masses of $m_1 = 4.00$ kg, $m_2 = 1.00$ kg, and $m_3 =$

2.00 kg, and the pulleys are frictionless. (a) Draw a free-body diagram of each object. (b) Determine the acceleration of each object, including its direction. (c) Determine the tensions in the two cords. **What If?** (d) If the tabletop were smooth, would the tensions increase, decrease, or remain the same? Explain.

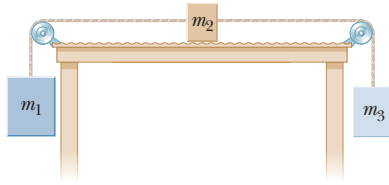


Figure P5.64

65. Two blocks connected by a rope of negligible mass are being dragged by a horizontal force (Fig. P5.65). Suppose $F = 68.0 \text{ N}$, $m_1 = 12.0 \text{ kg}$, $m_2 = 18.0 \text{ kg}$, and the coefficient of kinetic friction between each block and the surface is 0.100. (a) Draw a free-body diagram for each block. Determine (b) the acceleration of the system and (c) the tension T in the rope.

AMT
M

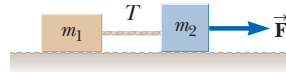


Figure P5.65

66. A block of mass 3.00 kg is pushed up against a wall by a force \vec{P} that makes an angle of $\theta = 50.0^\circ$ with the horizontal as shown in Figure P5.66. The coefficient of static friction between the block and the wall is 0.250. (a) Determine the possible values for the magnitude of \vec{P} that allow the block to remain stationary. (b) Describe what happens if $|\vec{P}|$ has a larger value and what happens if it is smaller. (c) Repeat parts (a) and (b), assuming the force makes an angle of $\theta = 13.0^\circ$ with the horizontal.

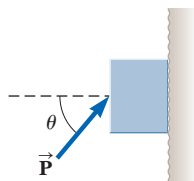


Figure P5.66

67. Review. One side of the roof of a house slopes up at 37.0° . A roofer kicks a round, flat rock that has been thrown onto the roof by a neighborhood child. The rock slides straight up the incline with an initial speed of 15.0 m/s . The coefficient of kinetic friction between the rock and the roof is 0.400. The rock slides 10.0 m up the roof to its peak. It crosses the ridge and goes into free fall, following a parabolic trajectory above the far side of the roof, with negligible air resistance. Determine the maximum height the rock reaches above the point where it was kicked.

68. Review. A Chinook salmon can swim underwater at 3.58 m/s , and it can also jump vertically upward, leaving the water with a speed of 6.26 m/s . A record salmon has length 1.50 m and mass 61.0 kg. Consider the fish swimming straight upward in the water below the surface of a lake. The gravitational force exerted on it is very nearly canceled out by a buoyant force exerted by the water as we will study in Chapter 14. The fish experiences an upward force P exerted by the water on its thrashing tail fin and a downward fluid friction force that we model as acting on its front end. Assume

the fluid friction force disappears as soon as the fish's head breaks the water surface and assume the force on its tail is constant. Model the gravitational force as suddenly switching full on when half the length of the fish is out of the water. Find the value of P .

69. Review. A magician pulls a tablecloth from under a 200-g mug located 30.0 cm from the edge of the cloth. The cloth exerts a friction force of 0.100 N on the mug, and the cloth is pulled with a constant acceleration of 3.00 m/s^2 . How far does the mug move relative to the horizontal tabletop before the cloth is completely out from under it? Note that the cloth must move more than 30 cm relative to the tabletop during the process.

70. A 5.00-kg block is placed on top of a 10.0-kg block (Fig. P5.70). A horizontal force of 45.0 N is applied to the 10-kg block, and the 5.00-kg block is tied to the wall. The coefficient of kinetic friction between all moving surfaces is 0.200. (a) Draw a free-body diagram for each block and identify the action–reaction forces between the blocks. (b) Determine the tension in the string and the magnitude of the acceleration of the 10.0-kg block.

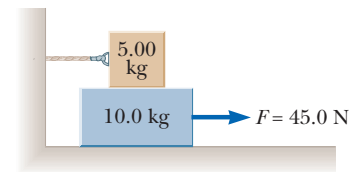


Figure P5.70

71. The system shown in Figure P5.49 has an acceleration of magnitude 1.50 m/s^2 . Assume that the coefficient of kinetic friction between block and incline is the same for both inclines. Find (a) the coefficient of kinetic friction and (b) the tension in the string.

Additional Problems

72. A black aluminum glider floats on a film of air above a level aluminum air track. Aluminum feels essentially no force in a magnetic field, and air resistance is negligible. A strong magnet is attached to the top of the glider, forming a total mass of 240 g. A piece of scrap iron attached to one end stop on the track attracts the magnet with a force of 0.823 N when the iron and the magnet are separated by 2.50 cm. (a) Find the acceleration of the glider at this instant. (b) The scrap iron is now attached to another green glider, forming total mass 120 g. Find the acceleration of each glider when the gliders are simultaneously released at 2.50-cm separation.

73. A young woman buys an inexpensive used car for stock car racing. It can attain highway speed with an acceleration of $8.40 \text{ mi/h} \cdot \text{s}$. By making changes to its engine, she can increase the net horizontal force on the car by 24.0%. With much less expense, she can remove material from the body of the car to decrease its mass by 24.0%. (a) Which of these two changes, if either, will result in the greater increase in the car's acceleration? (b) If she makes both changes, what acceleration can she attain?

74. Why is the following situation impossible? A book sits on an inclined plane on the surface of the Earth. The angle

of the plane with the horizontal is 60.0° . The coefficient of kinetic friction between the book and the plane is 0.300 . At time $t = 0$, the book is released from rest. The book then slides through a distance of 1.00 m, measured along the plane, in a time interval of 0.483 s.

- 75. Review.** A hockey puck struck by a hockey stick is given an initial speed v_i in the positive x direction. The coefficient of kinetic friction between the ice and the puck is μ_k . (a) Obtain an expression for the acceleration of the puck as it slides across the ice. (b) Use the result of part (a) to obtain an expression for the distance d the puck slides. The answer should be in terms of the variables v_i , μ_k , and g only.
- 76.** A 1.00 -kg glider on a horizontal air track is pulled by a string at an angle θ . The taut string runs over a pulley and is attached to a hanging object of mass 0.500 kg as shown in Figure P5.76. (a) Show that the speed v_x of the glider and the speed v_y of the hanging object are related by $v_x = uv_y$, where $u = z(z^2 - h_0^2)^{-1/2}$. (b) The glider is released from rest. Show that at that instant the acceleration a_x of the glider and the acceleration a_y of the hanging object are related by $a_x = ua_y$. (c) Find the tension in the string at the instant the glider is released for $h_0 = 80.0$ cm and $\theta = 30.0^\circ$.

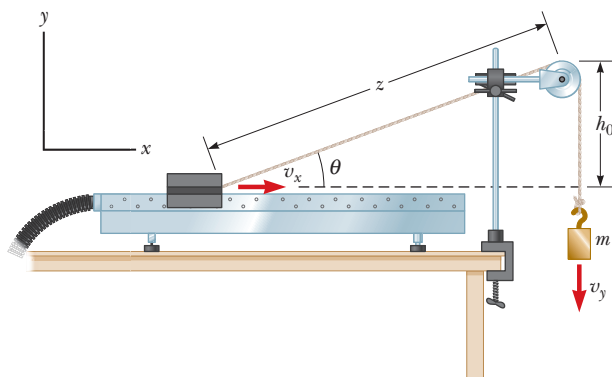


Figure P5.76

- 77.** A frictionless plane is 10.0 m long and inclined at 35.0° . **M** A sled starts at the bottom with an initial speed of 5.00 m/s up the incline. When the sled reaches the point at which it momentarily stops, a second sled is released from the top of the incline with an initial speed v_i . Both sleds reach the bottom of the incline at the same moment. (a) Determine the distance that the first sled traveled up the incline. (b) Determine the initial speed of the second sled.

- 78.** A rope with mass m_r is attached to a block with mass m_b as in Figure P5.78. The block rests on a frictionless, horizontal surface. The rope does not stretch. The free end of the rope is pulled to the right with a horizontal force \vec{F} . (a) Draw force diagrams for the rope and the block, noting that the tension in the rope is not uniform. (b) Find the acceleration of the system in terms of m_b , m_r , and F . (c) Find the magnitude of the force the rope exerts on the block. (d) What happens

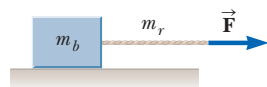


Figure P5.78

to the force on the block as the rope's mass approaches zero? What can you state about the tension in a *light* cord joining a pair of moving objects?

- 79. GP** Two blocks of masses m_1 and m_2 are placed on a table in contact with each other as discussed in Example 5.7 and shown in Figure 5.12a. The coefficient of kinetic friction between the block of mass m_1 and the table is μ_1 , and that between the block of mass m_2 and the table is μ_2 . A horizontal force of magnitude F is applied to the block of mass m_1 . We wish to find P , the magnitude of the contact force between the blocks. (a) Draw diagrams showing the forces for each block. (b) What is the net force on the system of two blocks? (c) What is the net force acting on m_1 ? (d) What is the net force acting on m_2 ? (e) Write Newton's second law in the x direction for each block. (f) Solve the two equations in two unknowns for the acceleration a of the blocks in terms of the masses, the applied force F , the coefficients of friction, and g . (g) Find the magnitude P of the contact force between the blocks in terms of the same quantities.
- 80.** On a single, light, vertical cable that does not stretch, a crane is lifting a $1\,207$ -kg Ferrari and, below it, a $1\,461$ -kg BMW Z8. The Ferrari is moving upward with speed 3.50 m/s and acceleration 1.25 m/s². (a) How do the velocity and acceleration of the BMW compare with those of the Ferrari? (b) Find the tension in the cable between the BMW and the Ferrari. (c) Find the tension in the cable above the Ferrari.
- 81.** An inventive child named Nick wants to reach an apple in a tree without climbing the tree. Sitting in a chair connected to a rope that passes over a frictionless pulley (Fig. P5.81), Nick pulls on the loose end of the rope with such a force that the spring scale reads 250 N. Nick's true weight is 320 N, and the chair weighs 160 N. Nick's feet are not touching the ground. (a) Draw one pair of diagrams showing the forces for Nick and the chair considered as separate systems and another diagram for Nick and the chair considered as one system. (b) Show that the acceleration of the system is *upward* and find its magnitude. (c) Find the force Nick exerts on the chair.



Figure P5.81 Problems 81 and 82.

- 82.** In the situation described in Problem 81 and Figure P5.81, the masses of the rope, spring balance, and pul-

ley are negligible. Nick's feet are not touching the ground. (a) Assume Nick is momentarily at rest when he stops pulling down on the rope and passes the end of the rope to another child, of weight 440 N, who is standing on the ground next to him. The rope does not break. Describe the ensuing motion. (b) Instead, assume Nick is momentarily at rest when he ties the end of the rope to a strong hook projecting from the tree trunk. Explain why this action can make the rope break.

83. In Example 5.7, we pushed on two blocks on a table. Suppose three blocks are in contact with one another on a frictionless, horizontal surface as shown in Figure P5.83. A horizontal force \vec{F} is applied to m_1 . Take $m_1 = 2.00$ kg, $m_2 = 3.00$ kg, $m_3 = 4.00$ kg, and $F = 18.0$ N. (a) Draw a separate free-body diagram for each block. (b) Determine the acceleration of the blocks. (c) Find the *resultant* force on each block. (d) Find the magnitudes of the contact forces between the blocks. (e) You are working on a construction project. A coworker is nailing up plasterboard on one side of a light partition, and you are on the opposite side, providing "backing" by leaning against the wall with your back pushing on it. Every hammer blow makes your back sting. The supervisor helps you put a heavy block of wood between the wall and your back. Using the situation analyzed in parts (a) through (d) as a model, explain how this change works to make your job more comfortable.

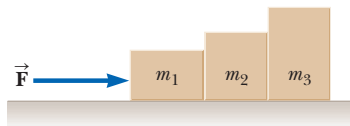


Figure P5.83

84. An aluminum block of mass $m_1 = 2.00$ kg and a copper block of mass $m_2 = 6.00$ kg are connected by a light string over a frictionless pulley. They sit on a steel surface as shown in Figure P5.84, where $\theta = 30.0^\circ$. (a) When they are released from rest, will they start to move? If they do, determine (b) their acceleration and (c) the tension in the string. If they do not move, determine (d) the sum of the magnitudes of the forces of friction acting on the blocks.

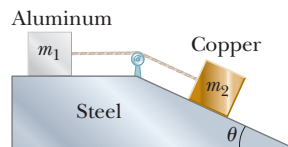


Figure P5.84

85. An object of mass M is held in place by an applied force \vec{F} and a pulley system as shown in Figure P5.85. The pulleys are massless and frictionless. (a) Draw diagrams showing the forces on each pulley. Find (b) the tension in each section of rope, T_1 , T_2 , T_3 , T_4 , and T_5 and (c) the magnitude of \vec{F} .

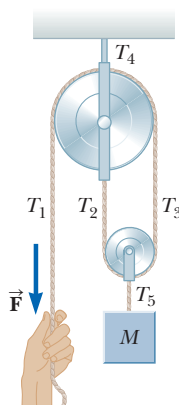


Figure P5.85

86. Any device that allows you to increase the force you exert is a kind of *machine*. Some machines, such as the prybar

or the inclined plane, are very simple. Some machines do not even look like machines. For example, your car is stuck in the mud and you can't pull hard enough to get it out. You do, however, have a long cable that you connect taut between your front bumper and the trunk of a stout tree. You now pull sideways on the cable at its midpoint, exerting a force f . Each half of the cable is displaced through a small angle θ from the straight line between the ends of the cable. (a) Deduce an expression for the force acting on the car. (b) Evaluate the cable tension for the case where $\theta = 7.00^\circ$ and $f = 100$ N.

87. Objects with masses $m_1 = 10.0$ kg and $m_2 = 5.00$ kg are connected by a light string that passes over a frictionless pulley as in Figure P5.40. If, when the system starts from rest, m_2 falls 1.00 m in 1.20 s, determine the coefficient of kinetic friction between m_1 and the table.
88. Consider the three connected objects shown in Figure P5.88. Assume first that the inclined plane is frictionless and that the system is in equilibrium. In terms of m , g , and θ , find (a) the mass M and (b) the tensions T_1 and T_2 . Now assume that the value of M is double the value found in part (a). Find (c) the acceleration of each object and (d) the tensions T_1 and T_2 . Next, assume that the coefficient of static friction between m and $2m$ and the inclined plane is μ_s and that the system is in equilibrium. Find (e) the maximum value of M and (f) the minimum value of M . (g) Compare the values of T_2 when M has its minimum and maximum values.

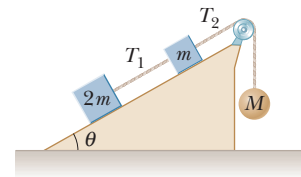


Figure P5.88

89. A crate of weight F_g is pushed by a force \vec{P} on a horizontal floor as shown in Figure P5.89. The coefficient of static friction is μ_s , and \vec{P} is directed at angle θ below the horizontal. (a) Show that the minimum value of P that will move the crate is given by

$$P = \frac{\mu_s F_g \sec \theta}{1 - \mu_s \tan \theta}$$

(b) Find the condition on θ in terms of μ_s for which motion of the crate is impossible for any value of P .

90. A student is asked to measure the acceleration of a glider on a frictionless, inclined plane, using an air track, a stopwatch, and a meterstick. The top of the track is measured to be 1.774 cm higher than the bottom of the track, and the length of the track is $d = 127.1$ cm. The cart is released from rest at the top of the incline, taken as $x = 0$, and its position x along the incline is measured as a function of time. For x values of 10.0 cm, 20.0 cm, 35.0 cm, 50.0 cm, 75.0 cm, and 100 cm, the measured times at which these positions are reached (averaged over five runs) are 1.02 s, 1.53 s,

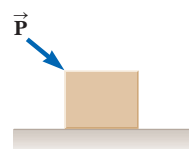


Figure P5.89

2.01 s, 2.64 s, 3.30 s, and 3.75 s, respectively. (a) Construct a graph of x versus t^2 , with a best-fit straight line to describe the data. (b) Determine the acceleration of the cart from the slope of this graph. (c) Explain how your answer to part (b) compares with the theoretical value you calculate using $a = g \sin \theta$ as derived in Example 5.6.

91. A flat cushion of mass m is released from rest at the corner of the roof of a building, at height h . A wind blowing along the side of the building exerts a constant horizontal force of magnitude F on the cushion as it drops as shown in Figure P5.91. The air exerts no vertical force. (a) Show that the path of the cushion is a straight line. (b) Does the cushion fall with constant velocity? Explain. (c) If $m = 1.20$ kg, $h = 8.00$ m, and $F = 2.40$ N, how far from the building will the cushion hit the level ground? **What If?** (d) If the cushion is thrown downward with a non-zero speed at the top of the building, what will be the shape of its trajectory? Explain.

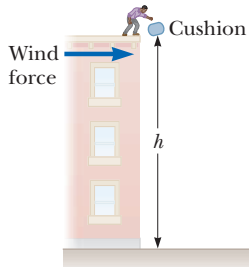


Figure P5.91

92. In Figure P5.92, the pulleys and the cord are light, all surfaces are frictionless, and the cord does not stretch. (a) How does the acceleration of block 1 compare with the acceleration of block 2? Explain your reasoning. (b) The mass of block 2 is 1.30 kg. Find its acceleration as it depends on the mass m_1 of block 1. (c) **What If?** What does the result of part (b) predict if m_1 is very much less than 1.30 kg? (d) What does the result of part (b) predict if m_1 approaches infinity? (e) In this last case, what is the tension in the cord? (f) Could you anticipate the answers to parts (c), (d), and (e) without first doing part (b)? Explain.

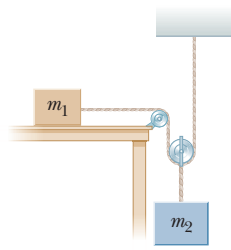


Figure P5.92

93. What horizontal force must be applied to a large block of mass M shown in Figure P5.93 so that the tan blocks remain stationary relative to M ? Assume all surfaces and the pulley are frictionless. Notice that the force exerted by the string accelerates m_2 .

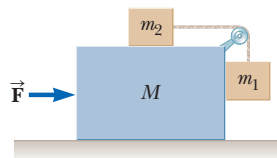


Figure P5.93

Problems 93 and 98.

94. An 8.40-kg object slides down a fixed, frictionless, inclined plane. Use a computer to determine and tabulate (a) the normal force exerted on the object and (b) its acceleration for a series of incline angles (measured from the horizontal) ranging from 0° to 90° in 5° increments. (c) Plot a graph of the normal force and the acceleration as functions of the incline angle. (d) In the limiting cases of 0° and 90° , are your results consistent with the known behavior?

95. A car accelerates down a hill (Fig. P5.95), going from rest to 30.0 m/s in 6.00 s. A toy inside the car hangs by a string from the car's ceiling. The ball in the figure represents the toy, of mass 0.100 kg. The acceleration is such that the string remains perpendicular to the ceiling. Determine (a) the angle θ and (b) the tension in the string.

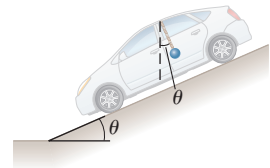


Figure P5.95

Challenge Problems

96. A time-dependent force, $\vec{F} = (8.00\hat{i} - 4.00t\hat{j})$, where \vec{F} is in newtons and t is in seconds, is exerted on a 2.00-kg object initially at rest. (a) At what time will the object be moving with a speed of 15.0 m/s? (b) How far is the object from its initial position when its speed is 15.0 m/s? (c) Through what total displacement has the object traveled at this moment?
97. The board sandwiched between two other boards in Figure P5.97 weighs 95.5 N. If the coefficient of static friction between the boards is 0.663, what must be the magnitude of the compression forces (assumed horizontal) acting on both sides of the center board to keep it from slipping?

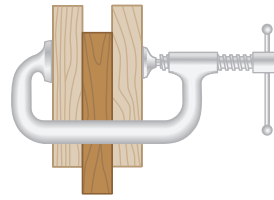


Figure P5.97

98. Initially, the system of objects shown in Figure P5.93 is held motionless. The pulley and all surfaces and wheels are frictionless. Let the force \vec{F} be zero and assume that m_1 can move only vertically. At the instant after the system of objects is released, find (a) the tension T in the string, (b) the acceleration of m_2 , (c) the acceleration of M , and (d) the acceleration of m_1 . (Note: The pulley accelerates along with the cart.)

99. A block of mass 2.20 kg is accelerated across a rough surface by a light cord passing over a small pulley as shown in Figure P5.99. The tension T in the cord is maintained at 10.0 N, and the pulley is 0.100 m above the top of the block. The coefficient of kinetic friction is 0.400. (a) Determine the acceleration of the block when $x = 0.400$ m. (b) Describe the general behavior of the acceleration as the block slides from a location where x is large to $x = 0$. (c) Find the maximum value of the acceleration and the position x for which it occurs. (d) Find the value of x for which the acceleration is zero.

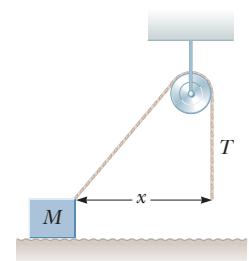


Figure P5.99

100. Why is the following situation impossible? A 1.30-kg toaster is not plugged in. The coefficient of static friction between the toaster and a horizontal countertop is 0.350. To make the toaster start moving, you carelessly pull on its electric cord. Unfortunately, the cord has become frayed from your previous similar actions and will break if the tension in the cord exceeds 4.00 N. By pulling on the cord at a particular angle, you successfully start the toaster moving without breaking the cord.

101. Review. A block of mass $m = 2.00$ kg is released from rest at $h = 0.500$ m above the surface of a table, at the top of a $\theta = 30.0^\circ$ incline as shown in Figure P5.101. The frictionless incline is fixed on a table of height $H = 2.00$ m. (a) Determine the acceleration of the block as it slides down the incline. (b) What is the velocity of the block as it leaves the incline? (c) How far from the table will the block hit the floor? (d) What time interval elapses between when the block is released and when it hits the floor? (e) Does the mass of the block affect any of the above calculations?

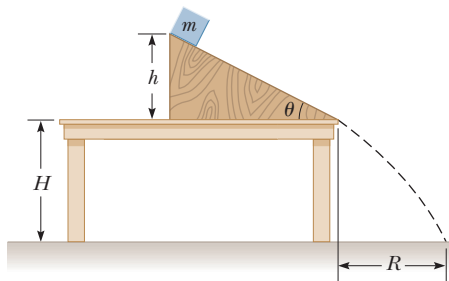


Figure P5.101 Problems 101 and 102.

102. In Figure P5.101, the incline has mass M and is fastened to the stationary horizontal tabletop. The block of mass m is placed near the bottom of the incline and is released with a quick push that sets it sliding upward. The block stops near the top of the incline as shown in the figure and then slides down again, always without friction. Find the force that the tabletop exerts on the incline throughout this motion in terms of m , M , g , and θ .

103. A block of mass $m = 2.00$ kg rests on the left edge of a block of mass $M = 8.00$ kg. The coefficient of kinetic friction between the two blocks is 0.300, and the surface on which the 8.00-kg block rests is frictionless. A constant horizontal force of magnitude $F = 10.0$ N is applied to the 2.00-kg block, setting it in motion as

shown in Figure P5.103a. If the distance L that the leading edge of the smaller block travels on the larger block is 3.00 m, (a) in what time interval will the smaller block make it to the right side of the 8.00-kg block as shown in Figure P5.103b? (Note: Both blocks are set into motion when \vec{F} is applied.) (b) How far does the 8.00-kg block move in the process?

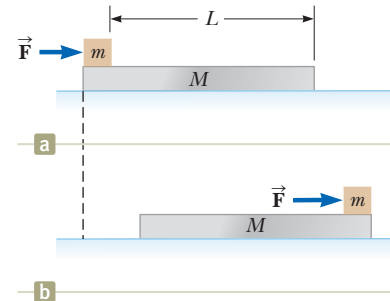


Figure P5.103

104. A mobile is formed by supporting four metal butterflies of equal mass m from a string of length L . The points of support are evenly spaced a distance ℓ apart as shown in Figure P5.104. The string forms an angle θ_1 with the ceiling at each endpoint. The center section of string is horizontal. (a) Find the tension in each section of string in terms of θ_1 , m , and g . (b) In terms of θ_1 , find the angle θ_2 that the sections of string between the outside butterflies and the inside butterflies form with the horizontal. (c) Show that the distance D between the endpoints of the string is

$$D = \frac{L}{5} \left\{ 2 \cos \theta_1 + 2 \cos \left[\tan^{-1} \left(\frac{1}{2} \tan \theta_1 \right) \right] + 1 \right\}$$

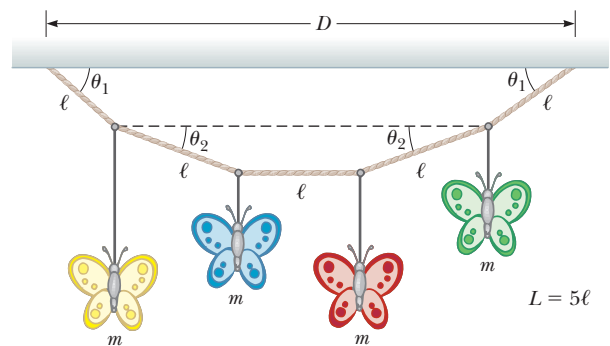


Figure P5.104

Circular Motion and Other Applications of Newton's Laws

- 6.1 Extending the Particle in Uniform Circular Motion Model
- 6.2 Nonuniform Circular Motion
- 6.3 Motion in Accelerated Frames
- 6.4 Motion in the Presence of Resistive Forces



Kyle Busch, driver of the #18 Snickers Toyota, leads Jeff Gordon, driver of the #24 Dupont Chevrolet, during the NASCAR Sprint Cup Series Kobalt Tools 500 at the Atlanta Motor Speedway on March 9, 2008, in Hampton, Georgia. The cars travel on a banked roadway to help them undergo circular motion on the turns. *(Chris Graythen/Getty Images for NASCAR)*

In the preceding chapter, we introduced Newton's laws of motion and incorporated them into two analysis models involving linear motion. Now we discuss motion that is slightly more complicated. For example, we shall apply Newton's laws to objects traveling in circular paths. We shall also discuss motion observed from an accelerating frame of reference and motion of an object through a viscous medium. For the most part, this chapter consists of a series of examples selected to illustrate the application of Newton's laws to a variety of new circumstances.

6.1 Extending the Particle in Uniform Circular Motion Model

In Section 4.4, we discussed the analysis model of a particle in uniform circular motion, in which a particle moves with constant speed v in a circular path having a radius r . The particle experiences an acceleration that has a magnitude

$$a_c = \frac{v^2}{r}$$

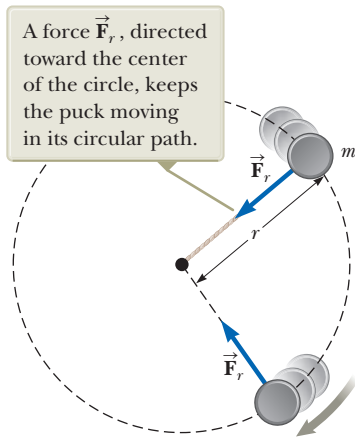


Figure 6.1 An overhead view of a puck moving in a circular path in a horizontal plane.

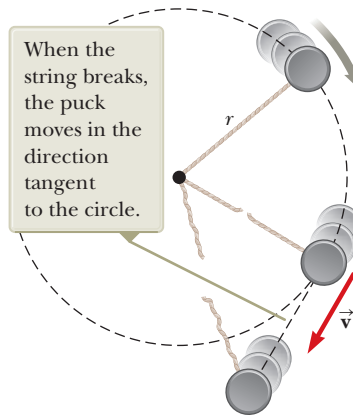


Figure 6.2 The string holding the puck in its circular path breaks.

The acceleration is called *centripetal acceleration* because \vec{a}_c is directed toward the center of the circle. Furthermore, \vec{a}_c is *always* perpendicular to \vec{v} . (If there were a component of acceleration parallel to \vec{v} , the particle's speed would be changing.)

Let us now extend the particle in uniform circular motion model from Section 4.4 by incorporating the concept of force. Consider a puck of mass m that is tied to a string of length r and moves at constant speed in a horizontal, circular path as illustrated in Figure 6.1. Its weight is supported by a frictionless table, and the string is anchored to a peg at the center of the circular path of the puck. Why does the puck move in a circle? According to Newton's first law, the puck would move in a straight line if there were no force on it; the string, however, prevents motion along a straight line by exerting on the puck a radial force \vec{F}_r that makes it follow the circular path. This force is directed along the string toward the center of the circle as shown in Figure 6.1.

If Newton's second law is applied along the radial direction, the net force causing the centripetal acceleration can be related to the acceleration as follows:

$$\sum F = ma_c = m \frac{v^2}{r} \quad (6.1)$$

A force causing a centripetal acceleration acts toward the center of the circular path and causes a change in the direction of the velocity vector. If that force should vanish, the object would no longer move in its circular path; instead, it would move along a straight-line path tangent to the circle. This idea is illustrated in Figure 6.2 for the puck moving in a circular path at the end of a string in a horizontal plane. If the string breaks at some instant, the puck moves along the straight-line path that is tangent to the circle at the position of the puck at this instant.

- Quick Quiz 6.1** You are riding on a Ferris wheel that is rotating with constant speed. The car in which you are riding always maintains its correct upward orientation; it does not invert. (i) What is the direction of the normal force on you from the seat when you are at the top of the wheel? (a) upward (b) downward (c) impossible to determine (ii) From the same choices, what is the direction of the net force on you when you are at the top of the wheel?

◀ Force causing centripetal acceleration

Pitfall Prevention 6.1

Direction of Travel When the String Is Cut Study Figure 6.2 very carefully. Many students (wrongly) think that the puck will move *radially* away from the center of the circle when the string is cut. The velocity of the puck is *tangent* to the circle. By Newton's first law, the puck continues to move in the same direction in which it is moving just as the force from the string disappears.

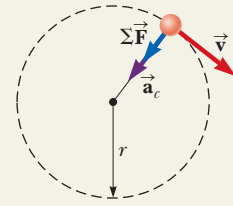
Analysis Model Particle in Uniform Circular Motion (Extension)

Imagine a moving object that can be modeled as a particle. If it moves in a circular path of radius r at a constant speed v , it experiences a centripetal acceleration. Because the particle is accelerating, there must be a net force acting on the particle. That force is directed toward the center of the circular path and is given by

$$\sum F = ma_c = m \frac{v^2}{r} \quad (6.1)$$

Examples

- the tension in a string of constant length acting on a rock twirled in a circle
- the gravitational force acting on a planet traveling around the Sun in a perfectly circular orbit (Chapter 13)
- the magnetic force acting on a charged particle moving in a uniform magnetic field (Chapter 29)
- the electric force acting on an electron in orbit around a nucleus in the Bohr model of the hydrogen atom (Chapter 42)



Example 6.1 The Conical Pendulum AM

A small ball of mass m is suspended from a string of length L . The ball revolves with constant speed v in a horizontal circle of radius r as shown in Figure 6.3. (Because the string sweeps out the surface of a cone, the system is known as a *conical pendulum*.) Find an expression for v in terms of the geometry in Figure 6.3.

SOLUTION

Conceptualize Imagine the motion of the ball in Figure 6.3a and convince yourself that the string sweeps out a cone and that the ball moves in a horizontal circle.

Categorize The ball in Figure 6.3 does not accelerate vertically. Therefore, we model it as a *particle in equilibrium* in the vertical direction. It experiences a centripetal acceleration in the horizontal direction, so it is modeled as a *particle in uniform circular motion* in this direction.

Analyze Let θ represent the angle between the string and the vertical. In the diagram of forces acting on the ball in Figure 6.3b, the force \vec{T} exerted by the string on the ball is resolved into a vertical component $T \cos \theta$ and a horizontal component $T \sin \theta$ acting toward the center of the circular path.

Apply the particle in equilibrium model in the vertical direction:

$$\sum F_y = T \cos \theta - mg = 0$$

$$(1) \quad T \cos \theta = mg$$

Use Equation 6.1 from the particle in uniform circular motion model in the horizontal direction:

$$(2) \quad \sum F_x = T \sin \theta = ma_c = \frac{mv^2}{r}$$

Divide Equation (2) by Equation (1) and use $\sin \theta / \cos \theta = \tan \theta$:

$$\tan \theta = \frac{v^2}{rg}$$

Solve for v :

$$v = \sqrt{rg \tan \theta}$$

Incorporate $r = L \sin \theta$ from the geometry in Figure 6.3a:

$$v = \sqrt{Lg \sin \theta \tan \theta}$$

Finalize Notice that the speed is independent of the mass of the ball. Consider what happens when θ goes to 90° so that the string is horizontal. Because the tangent of 90° is infinite, the speed v is infinite, which tells us the string cannot possibly be horizontal. If it were, there would be no vertical component of the force \vec{T} to balance the gravitational force on the ball. That is why we mentioned in regard to Figure 6.1 that the puck's weight in the figure is supported by a frictionless table.

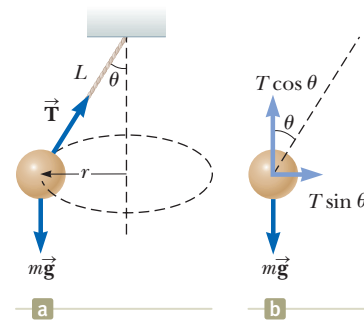


Figure 6.3 (Example 6.1) (a) A conical pendulum. The path of the ball is a horizontal circle. (b) The forces acting on the ball.

Example 6.2 How Fast Can It Spin? **AM**

A puck of mass 0.500 kg is attached to the end of a cord 1.50 m long. The puck moves in a horizontal circle as shown in Figure 6.1. If the cord can withstand a maximum tension of 50.0 N, what is the maximum speed at which the puck can move before the cord breaks? Assume the string remains horizontal during the motion.

SOLUTION

Conceptualize It makes sense that the stronger the cord, the faster the puck can move before the cord breaks. Also, we expect a more massive puck to break the cord at a lower speed. (Imagine whirling a bowling ball on the cord!)

Categorize Because the puck moves in a circular path, we model it as a *particle in uniform circular motion*.

Analyze Incorporate the tension and the centripetal acceleration into Newton's second law as described by Equation 6.1:

$$T = m \frac{v^2}{r}$$

Solve for v :

$$(1) \quad v = \sqrt{\frac{Tr}{m}}$$

Find the maximum speed the puck can have, which corresponds to the maximum tension the string can withstand:

$$v_{\max} = \sqrt{\frac{T_{\max}r}{m}} = \sqrt{\frac{(50.0 \text{ N})(1.50 \text{ m})}{0.500 \text{ kg}}} = 12.2 \text{ m/s}$$

Finalize Equation (1) shows that v increases with T and decreases with larger m , as we expected from our conceptualization of the problem.

WHAT IF? Suppose the puck moves in a circle of larger radius at the same speed v . Is the cord more likely or less likely to break?

Answer The larger radius means that the change in the direction of the velocity vector will be smaller in a given time interval. Therefore, the acceleration is smaller and the required tension in the string is smaller. As a result, the string is less likely to break when the puck travels in a circle of larger radius.

Example 6.3 What Is the Maximum Speed of the Car? **AM**

A 1500-kg car moving on a flat, horizontal road negotiates a curve as shown in Figure 6.4a. If the radius of the curve is 35.0 m and the coefficient of static friction between the tires and dry pavement is 0.523, find the maximum speed the car can have and still make the turn successfully.

SOLUTION

Conceptualize Imagine that the curved roadway is part of a large circle so that the car is moving in a circular path.

Categorize Based on the Conceptualize step of the problem, we model the car as a *particle in uniform circular motion* in the horizontal direction. The car is not accelerating vertically, so it is modeled as a *particle in equilibrium* in the vertical direction.

Analyze Figure 6.4b shows the forces on the car. The force that enables the car to remain in its circular path is the force of static friction. (It is *static* because no slipping occurs at the point of contact between road and tires. If this force of static friction were zero—for example, if the car were on an icy road—the car would continue in a straight line and slide off the curved road.) The maximum speed v_{\max} the car can have around the curve is the speed at which it is on the verge of skidding outward. At this point, the friction force has its maximum value $f_{s,\max} = \mu_s n$.

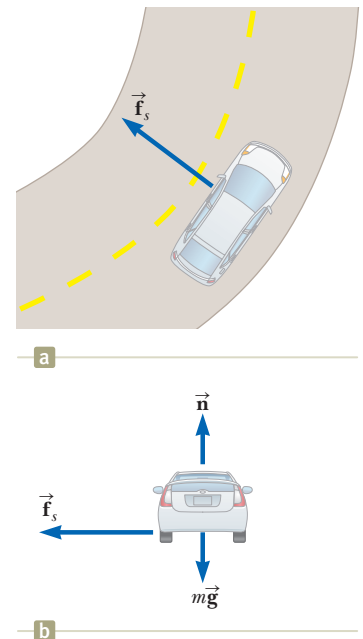


Figure 6.4 (Example 6.3) (a) The force of static friction directed toward the center of the curve keeps the car moving in a circular path. (b) The forces acting on the car.

continued

6.3 continued

Apply Equation 6.1 from the particle in uniform circular motion model in the radial direction for the maximum speed condition:

$$(1) \quad f_{s,\max} = \mu_s n = m \frac{v_{\max}^2}{r}$$

Apply the particle in equilibrium model to the car in the vertical direction:

$$\sum F_y = 0 \rightarrow n - mg = 0 \rightarrow n = mg$$

Solve Equation (1) for the maximum speed and substitute for n :

$$(2) \quad v_{\max} = \sqrt{\frac{\mu_s n r}{m}} = \sqrt{\frac{\mu_s m g r}{m}} = \sqrt{\mu_s g r}$$

Substitute numerical values:

$$v_{\max} = \sqrt{(0.523)(9.80 \text{ m/s}^2)(35.0 \text{ m})} = 13.4 \text{ m/s}$$

Finalize This speed is equivalent to 30.0 mi/h. Therefore, if the speed limit on this roadway is higher than 30 mi/h, this roadway could benefit greatly from some banking, as in the next example! Notice that the maximum speed does not depend on the mass of the car, which is why curved highways do not need multiple speed limits to cover the various masses of vehicles using the road.

WHAT IF? Suppose a car travels this curve on a wet day and begins to skid on the curve when its speed reaches only 8.00 m/s. What can we say about the coefficient of static friction in this case?

Answer The coefficient of static friction between the tires and a wet road should be smaller than that between the tires and a dry road. This expectation is consistent with experience with driving because a skid is more likely on a wet road than a dry road.

To check our suspicion, we can solve Equation (2) for the coefficient of static friction:

$$\mu_s = \frac{v_{\max}^2}{g r}$$

Substituting the numerical values gives

$$\mu_s = \frac{v_{\max}^2}{g r} = \frac{(8.00 \text{ m/s})^2}{(9.80 \text{ m/s}^2)(35.0 \text{ m})} = 0.187$$

which is indeed smaller than the coefficient of 0.523 for the dry road.

Example 6.4 The Banked Roadway **AM**

A civil engineer wishes to redesign the curved roadway in Example 6.3 in such a way that a car will not have to rely on friction to round the curve without skidding. In other words, a car moving at the designated speed can negotiate the curve even when the road is covered with ice. Such a road is usually *banked*, which means that the roadway is tilted toward the inside of the curve as seen in the opening photograph for this chapter. Suppose the designated speed for the road is to be 13.4 m/s (30.0 mi/h) and the radius of the curve is 35.0 m. At what angle should the curve be banked?

SOLUTION

Conceptualize The difference between this example and Example 6.3 is that the car is no longer moving on a flat roadway. Figure 6.5 shows the banked roadway, with the center of the circular path of the car far to the left of the figure. Notice that the horizontal component of the normal force participates in causing the car's centripetal acceleration.

Categorize As in Example 6.3, the car is modeled as a *particle in equilibrium* in the vertical direction and a *particle in uniform circular motion* in the horizontal direction.

Analyze On a level (unbanked) road, the force that causes the centripetal acceleration is the force of static friction between tires and the road as we saw in the preceding example. If the road is banked at an angle θ as in Figure 6.5, however, the

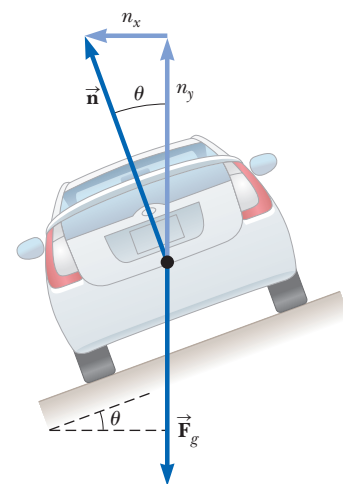


Figure 6.5 (Example 6.4) A car moves into the page and is rounding a curve on a road banked at an angle θ to the horizontal. When friction is neglected, the force that causes the centripetal acceleration and keeps the car moving in its circular path is the horizontal component of the normal force.

6.4 continued

normal force \vec{n} has a horizontal component toward the center of the curve. Because the road is to be designed so that the force of static friction is zero, the component $n_x = n \sin \theta$ is the only force that causes the centripetal acceleration.

Write Newton's second law for the car in the radial direction, which is the x direction:

$$(1) \quad \sum F_r = n \sin \theta = \frac{mv^2}{r}$$

Apply the particle in equilibrium model to the car in the vertical direction:

$$\sum F_y = n \cos \theta - mg = 0$$

$$(2) \quad n \cos \theta = mg$$

Divide Equation (1) by Equation (2):

$$(3) \quad \tan \theta = \frac{v^2}{rg}$$

Solve for the angle θ :

$$\theta = \tan^{-1} \left[\frac{(13.4 \text{ m/s})^2}{(35.0 \text{ m})(9.80 \text{ m/s}^2)} \right] = 27.6^\circ$$

Finalize Equation (3) shows that the banking angle is independent of the mass of the vehicle negotiating the curve. If a car rounds the curve at a speed less than 13.4 m/s, the centripetal acceleration decreases. Therefore, the normal force, which is unchanged, is sufficient to cause *two* accelerations: the lower centripetal acceleration and an acceleration of the car down the inclined roadway. Consequently, an additional friction force parallel to the roadway and upward is needed to keep the car from sliding down the bank (to the left in Fig. 6.5). Similarly, a driver attempting to negotiate the curve at a speed greater than 13.4 m/s has to depend on friction to keep from sliding up the bank (to the right in Fig. 6.5).

WHAT IF? Imagine that this same roadway were built on Mars in the future to connect different colony centers. Could it be traveled at the same speed?

Answer The reduced gravitational force on Mars would mean that the car is not pressed as tightly to the roadway. The reduced normal force results in a smaller component of the normal force toward the center of the circle. This smaller component would not be sufficient to provide the centripetal acceleration associated with the original speed. The centripetal acceleration must be reduced, which can be done by reducing the speed v .

Mathematically, notice that Equation (3) shows that the speed v is proportional to the square root of g for a roadway of fixed radius r banked at a fixed angle θ . Therefore, if g is smaller, as it is on Mars, the speed v with which the roadway can be safely traveled is also smaller.

Example 6.5 Riding the Ferris Wheel **AM**

A child of mass m rides on a Ferris wheel as shown in Figure 6.6a. The child moves in a vertical circle of radius 10.0 m at a constant speed of 3.00 m/s.

(A) Determine the force exerted by the seat on the child at the bottom of the ride. Express your answer in terms of the weight of the child, mg .

SOLUTION

Conceptualize Look carefully at Figure 6.6a. Based on experiences you may have had on a Ferris wheel or driving over small hills on a roadway, you would expect to feel lighter at the top of the path. Similarly, you would expect to feel heavier at the bottom of the path. At both the bottom of the path and the top, the normal and gravitational forces on the child act in *opposite* directions. The vector sum of these two forces gives a force of constant magnitude that keeps the child moving in a circular path at a constant speed. To yield net force vectors with the same magnitude, the normal force at the bottom must be greater than that at the top.

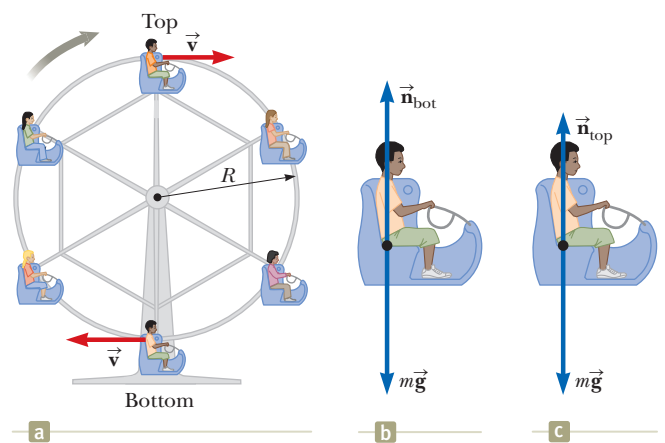


Figure 6.6 (Example 6.5) (a) A child rides on a Ferris wheel. (b) The forces acting on the child at the bottom of the path. (c) The forces acting on the child at the top of the path.

continued

6.5 continued

Categorize Because the speed of the child is constant, we can categorize this problem as one involving a *particle* (the child) in *uniform circular motion*, complicated by the gravitational force acting at all times on the child.

Analyze We draw a diagram of forces acting on the child at the bottom of the ride as shown in Figure 6.6b. The only forces acting on him are the downward gravitational force $\vec{F}_g = m\vec{g}$ and the upward force \vec{n}_{bot} exerted by the seat. The net upward force on the child that provides his centripetal acceleration has a magnitude $n_{\text{bot}} - mg$.

Using the particle in uniform circular motion model, apply Newton's second law to the child in the radial direction when he is at the bottom of the ride:

$$\sum F = n_{\text{bot}} - mg = m \frac{v^2}{r}$$

Solve for the force exerted by the seat on the child:

$$n_{\text{bot}} = mg + m \frac{v^2}{r} = mg \left(1 + \frac{v^2}{rg} \right)$$

Substitute numerical values given for the speed and radius:

$$\begin{aligned} n_{\text{bot}} &= mg \left[1 + \frac{(3.00 \text{ m/s})^2}{(10.0 \text{ m})(9.80 \text{ m/s}^2)} \right] \\ &= 1.09 mg \end{aligned}$$

Hence, the magnitude of the force \vec{n}_{bot} exerted by the seat on the child is *greater* than the weight of the child by a factor of 1.09. So, the child experiences an apparent weight that is greater than his true weight by a factor of 1.09.

(B) Determine the force exerted by the seat on the child at the top of the ride.

SOLUTION

Analyze The diagram of forces acting on the child at the top of the ride is shown in Figure 6.6c. The net downward force that provides the centripetal acceleration has a magnitude $mg - n_{\text{top}}$.

Apply Newton's second law to the child at this position:

$$\sum F = mg - n_{\text{top}} = m \frac{v^2}{r}$$

Solve for the force exerted by the seat on the child:

$$n_{\text{top}} = mg - m \frac{v^2}{r} = mg \left(1 - \frac{v^2}{rg} \right)$$

Substitute numerical values:

$$\begin{aligned} n_{\text{top}} &= mg \left[1 - \frac{(3.00 \text{ m/s})^2}{(10.0 \text{ m})(9.80 \text{ m/s}^2)} \right] \\ &= 0.908 mg \end{aligned}$$

In this case, the magnitude of the force exerted by the seat on the child is *less* than his true weight by a factor of 0.908, and the child feels lighter.

Finalize The variations in the normal force are consistent with our prediction in the Conceptualize step of the problem.

WHAT IF? Suppose a defect in the Ferris wheel mechanism causes the speed of the child to increase to 10.0 m/s. What does the child experience at the top of the ride in this case?

Answer If the calculation above is performed with $v = 10.0 \text{ m/s}$, the magnitude of the normal force at the top of the ride is negative, which is impossible. We interpret it to mean that the required centripetal acceleration of the child is larger than that due to gravity. As a result, the child will lose contact with the seat and will only stay in his circular path if there is a safety bar or a seat belt that provides a downward force on him to keep him in his seat. At the bottom of the ride, the normal force is $2.02 mg$, which would be uncomfortable.

6.2 Nonuniform Circular Motion

In Chapter 4, we found that if a particle moves with varying speed in a circular path, there is, in addition to the radial component of acceleration, a tangential component having magnitude $|dv/dt|$. Therefore, the force acting on the particle

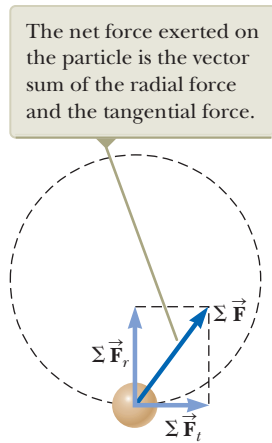


Figure 6.7 When the net force acting on a particle moving in a circular path has a tangential component ΣF_t , the particle's speed changes.

must also have a tangential and a radial component. Because the total acceleration is $\vec{a} = \vec{a}_r + \vec{a}_t$, the total force exerted on the particle is $\Sigma \vec{F} = \Sigma \vec{F}_r + \Sigma \vec{F}_t$ as shown in Figure 6.7. (We express the radial and tangential forces as net forces with the summation notation because each force could consist of multiple forces that combine.) The vector $\Sigma \vec{F}_r$ is directed toward the center of the circle and is responsible for the centripetal acceleration. The vector $\Sigma \vec{F}_t$ tangent to the circle is responsible for the tangential acceleration, which represents a change in the particle's speed with time.

Quick Quiz 6.2 A bead slides at constant speed along a curved wire lying on a horizontal surface as shown in Figure 6.8. (a) Draw the vectors representing the force exerted by the wire on the bead at points A, B, and C. (b) Suppose the bead in Figure 6.8 speeds up with constant tangential acceleration as it moves toward the right. Draw the vectors representing the force on the bead at points A, B, and C.

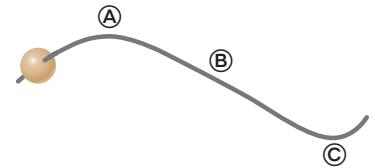


Figure 6.8 (Quick Quiz 6.2) A bead slides along a curved wire.

Example 6.6 Keep Your Eye on the Ball **AM**

A small sphere of mass m is attached to the end of a cord of length R and set into motion in a vertical circle about a fixed point O as illustrated in Figure 6.9. Determine the tangential acceleration of the sphere and the tension in the cord at any instant when the speed of the sphere is v and the cord makes an angle θ with the vertical.

SOLUTION

Conceptualize Compare the motion of the sphere in Figure 6.9 with that of the child in Figure 6.6a associated with Example 6.5. Both objects travel in a circular path. Unlike the child in Example 6.5, however, the speed of the sphere is *not* uniform in this example because, at most points along the path, a tangential component of acceleration arises from the gravitational force exerted on the sphere.

Categorize We model the sphere as a *particle under a net force* and moving in a circular path, but it is not a particle in *uniform* circular motion. We need to use the techniques discussed in this section on nonuniform circular motion.

Analyze From the force diagram in Figure 6.9, we see that the only forces acting on the sphere are the gravitational force

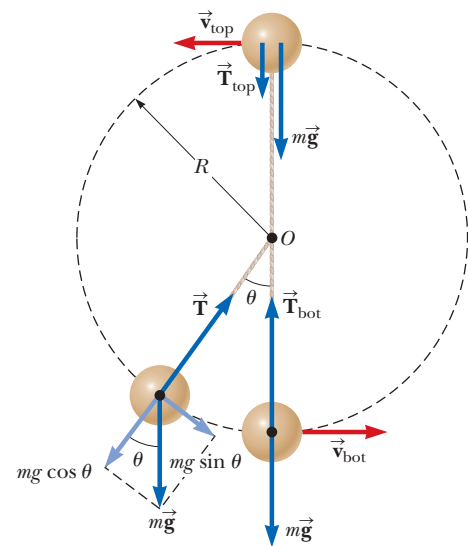


Figure 6.9 (Example 6.6) The forces acting on a sphere of mass m connected to a cord of length R and rotating in a vertical circle centered at O . Forces acting on the sphere are shown when the sphere is at the top and bottom of the circle and at an arbitrary location.

6.6 continued

$\vec{\mathbf{F}}_g = m\vec{\mathbf{g}}$ exerted by the Earth and the force $\vec{\mathbf{T}}$ exerted by the cord. We resolve $\vec{\mathbf{F}}_g$ into a tangential component $mg \sin \theta$ and a radial component $mg \cos \theta$.

From the particle under a net force model, apply Newton's second law to the sphere in the tangential direction:

$$\begin{aligned}\sum F_t &= mg \sin \theta = ma_t \\ a_t &= g \sin \theta\end{aligned}$$

Apply Newton's second law to the forces acting on the sphere in the radial direction, noting that both $\vec{\mathbf{T}}$ and $\vec{\mathbf{a}}_r$ are directed toward O . As noted in Section 4.5, we can use Equation 4.14 for the centripetal acceleration of a particle even when it moves in a circular path in nonuniform motion:

$$\begin{aligned}\sum F_r &= T - mg \cos \theta = \frac{mv^2}{R} \\ T &= mg \left(\frac{v^2}{Rg} + \cos \theta \right)\end{aligned}$$

Finalize Let us evaluate this result at the top and bottom of the circular path (Fig. 6.9):

$$T_{\text{top}} = mg \left(\frac{v_{\text{top}}^2}{Rg} - 1 \right) \quad T_{\text{bot}} = mg \left(\frac{v_{\text{bot}}^2}{Rg} + 1 \right)$$

These results have similar mathematical forms as those for the normal forces n_{top} and n_{bot} on the child in Example 6.5, which is consistent with the normal force on the child playing a similar physical role in Example 6.5 as the tension in the string plays in this example. Keep in mind, however, that the normal force $\vec{\mathbf{n}}$ on the child in Example 6.5 is always upward, whereas the force $\vec{\mathbf{T}}$ in this example changes direction because it must always point inward along the string. Also note that v in the expressions above varies for different positions of the sphere, as indicated by the subscripts, whereas v in Example 6.5 is constant.

WHAT IF? What if the ball is set in motion with a slower speed?

(A) What speed would the ball have as it passes over the top of the circle if the tension in the cord goes to zero instantaneously at this point?

Answer Let us set the tension equal to zero in the expression for T_{top} :

$$0 = mg \left(\frac{v_{\text{top}}^2}{Rg} - 1 \right) \rightarrow v_{\text{top}} = \sqrt{gR}$$

(B) What if the ball is set in motion such that the speed at the top is less than this value? What happens?

Answer In this case, the ball never reaches the top of the circle. At some point on the way up, the tension in the string goes to zero and the ball becomes a projectile. It follows a segment of a parabolic path over the top of its motion, rejoining the circular path on the other side when the tension becomes nonzero again.

6.3 Motion in Accelerated Frames

Newton's laws of motion, which we introduced in Chapter 5, describe observations that are made in an inertial frame of reference. In this section, we analyze how Newton's laws are applied by an observer in a noninertial frame of reference, that is, one that is accelerating. For example, recall the discussion of the air hockey table on a train in Section 5.2. The train moving at constant velocity represents an inertial frame. An observer on the train sees the puck at rest remain at rest, and Newton's first law appears to be obeyed. The accelerating train is not an inertial frame. According to you as the observer on this train, there appears to be no force on the puck, yet it accelerates from rest toward the back of the train, appearing to violate Newton's first law. This property is a general property of observations made in noninertial frames: there appear to be unexplained accelerations of objects that are not "fastened" to the frame. Newton's first law is not violated, of course. It only appears to be violated because of observations made from a noninertial frame.

On the accelerating train, as you watch the puck accelerating toward the back of the train, you might conclude based on your belief in Newton's second law that a

force has acted on the puck to cause it to accelerate. We call an apparent force such as this one a **fictitious force** because it is not a real force and is due only to observations made in an accelerated reference frame. A fictitious force appears to act on an object in the same way as a real force. Real forces are always interactions between two objects, however, and you cannot identify a second object for a fictitious force. (What second object is interacting with the puck to cause it to accelerate?) In general, simple fictitious forces appear to act in the direction *opposite* that of the acceleration of the noninertial frame. For example, the train accelerates forward and there appears to be a fictitious force causing the puck to slide toward the back of the train.

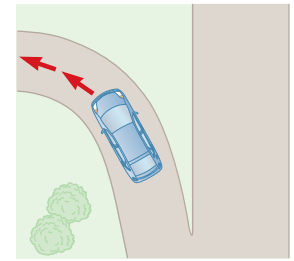
The train example describes a fictitious force due to a change in the train's speed. Another fictitious force is due to the change in the *direction* of the velocity vector. To understand the motion of a system that is noninertial because of a change in direction, consider a car traveling along a highway at a high speed and approaching a curved exit ramp on the left as shown in Figure 6.10a. As the car takes the sharp left turn on the ramp, a person sitting in the passenger seat leans or slides to the right and hits the door. At that point the force exerted by the door on the passenger keeps her from being ejected from the car. What causes her to move toward the door? A popular but incorrect explanation is that a force acting toward the right in Figure 6.10b pushes the passenger outward from the center of the circular path. Although often called the “centrifugal force,” it is a fictitious force. The car represents a noninertial reference frame that has a centripetal acceleration toward the center of its circular path. As a result, the passenger feels an apparent force which is outward from the center of the circular path, or to the right in Figure 6.10b, in the direction opposite that of the acceleration.

Let us address this phenomenon in terms of Newton's laws. Before the car enters the ramp, the passenger is moving in a straight-line path. As the car enters the ramp and travels a curved path, the passenger tends to move along the original straight-line path, which is in accordance with Newton's first law: the natural tendency of an object is to continue moving in a straight line. If a sufficiently large force (toward the center of curvature) acts on the passenger as in Figure 6.10c, however, she moves in a curved path along with the car. This force is the force of friction between her and the car seat. If this friction force is not large enough, the seat follows a curved path while the passenger tends to continue in the straight-line path of the car before the car began the turn. Therefore, from the point of view of an observer in the car, the passenger leans or slides to the right relative to the seat. Eventually, she encounters the door, which provides a force large enough to enable her to follow the same curved path as the car.

Another interesting fictitious force is the “Coriolis force.” It is an apparent force caused by changing the radial position of an object in a rotating coordinate system.

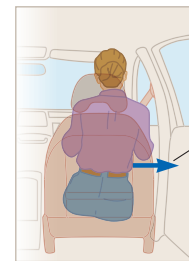
For example, suppose you and a friend are on opposite sides of a rotating circular platform and you decide to throw a baseball to your friend. Figure 6.11a on page 160 represents what an observer would see if the ball is viewed while the observer is hovering at rest above the rotating platform. According to this observer, who is in an inertial frame, the ball follows a straight line as it must according to Newton's first law. At $t = 0$ you throw the ball toward your friend, but by the time t_f when the ball has crossed the platform, your friend has moved to a new position and can't catch the ball. Now, however, consider the situation from your friend's viewpoint. Your friend is in a noninertial reference frame because he is undergoing a centripetal acceleration relative to the inertial frame of the Earth's surface. He starts off seeing the baseball coming toward him, but as it crosses the platform, it veers to one side as shown in Figure 6.11b. Therefore, your friend on the rotating platform states that the ball does not obey Newton's first law and claims that a sideways force is causing the ball to follow a curved path. This fictitious force is called the Coriolis force.

Fictitious forces may not be real forces, but they can have real effects. An object on your dashboard *really* slides off if you press the accelerator of your car. As you ride on a merry-go-round, you feel pushed toward the outside as if due to the fictitious “centrifugal force.” You are likely to fall over and injure yourself due to the



a

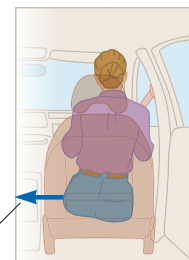
From the passenger's frame of reference, a force appears to push her toward the right door, but it is a fictitious force.



Fictitious force

b

Relative to the reference frame of the Earth, the car seat applies a real force (friction) toward the left on the passenger, causing her to change direction along with the rest of the car.



Real force

c

Figure 6.10 (a) A car approaching a curved exit ramp. What causes a passenger in the front seat to move toward the right-hand door? (b) Passenger's frame of reference. (c) Reference frame of the Earth.

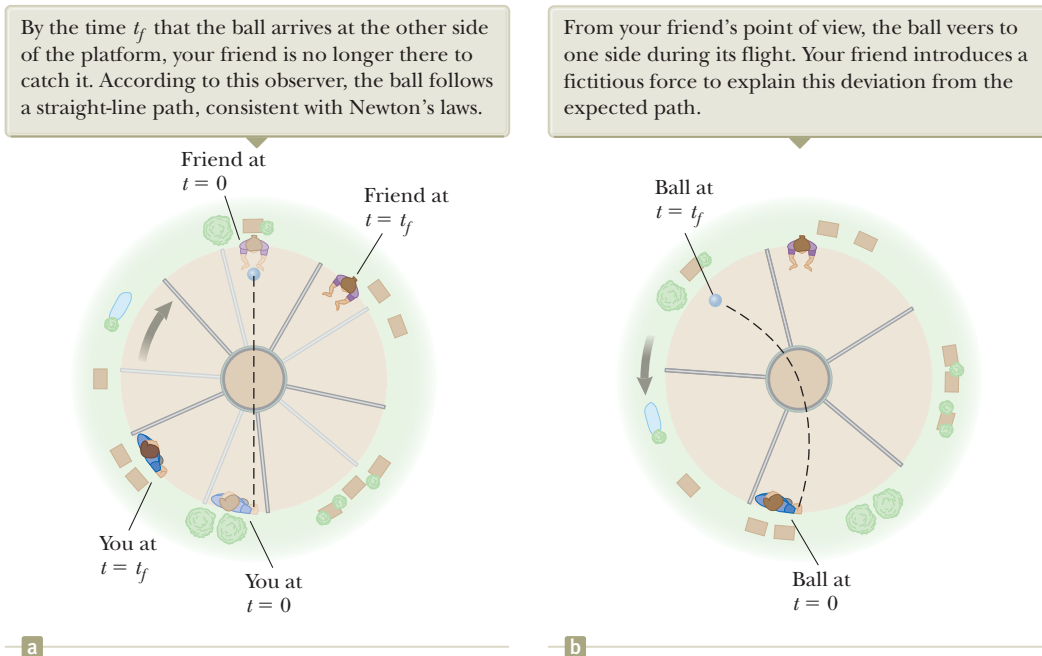


Figure 6.11 You and your friend stand at the edge of a rotating circular platform. You throw the ball at $t = 0$ in the direction of your friend. (a) Overhead view observed by someone in an inertial reference frame attached to the Earth. The ground appears stationary, and the platform rotates clockwise. (b) Overhead view observed by someone in an inertial reference frame attached to the platform. The platform appears stationary, and the ground rotates counterclockwise.

Pitfall Prevention 6.2

Centrifugal Force The commonly heard phrase “centrifugal force” is described as a force pulling *outward* on an object moving in a circular path. If you are feeling a “centrifugal force” on a rotating carnival ride, what is the other object with which you are interacting? You cannot identify another object because it is a fictitious force that occurs when you are in a noninertial reference frame.

Coriolis force if you walk along a radial line while a merry-go-round rotates. (One of the authors did so and suffered a separation of the ligaments from his ribs when he fell over.) The Coriolis force due to the rotation of the Earth is responsible for rotations of hurricanes and for large-scale ocean currents.

- Quick Quiz 6.3** Consider the passenger in the car making a left turn in Figure 6.10. Which of the following is correct about forces in the horizontal direction if she is making contact with the right-hand door? (a) The passenger is in equilibrium between real forces acting to the right and real forces acting to the left. (b) The passenger is subject only to real forces acting to the right. (c) The passenger is subject only to real forces acting to the left. (d) None of those statements is true.

Example 6.7

Fictitious Forces in Linear Motion AM

A small sphere of mass m hangs by a cord from the ceiling of a boxcar that is accelerating to the right as shown in Figure 6.12. Both the inertial observer on the ground in Figure 6.12a and the noninertial observer on the train in Figure 6.12b agree that the cord makes an angle θ with respect to the vertical. The noninertial observer claims that a force, which we know to be fictitious, causes the observed deviation of the cord from the vertical. How is the magnitude of this force related to the boxcar's acceleration measured by the inertial observer in Figure 6.12a?

SOLUTION

Conceptualize Place yourself in the role of each of the two observers in Figure 6.12. As the inertial observer on the ground, you see the boxcar accelerating and know that the deviation of the cord is due to this acceleration. As the noninertial observer on the boxcar, imagine that you ignore any effects of the car's motion so that you are not aware of its acceleration. Because you are unaware of this acceleration, you claim that a force is pushing sideways on the sphere to cause the deviation of the cord from the vertical. To make the conceptualization more real, try running from rest while holding a hanging object on a string and notice that the string is at an angle to the vertical while you are accelerating, as if a force is pushing the object backward.

6.7 continued

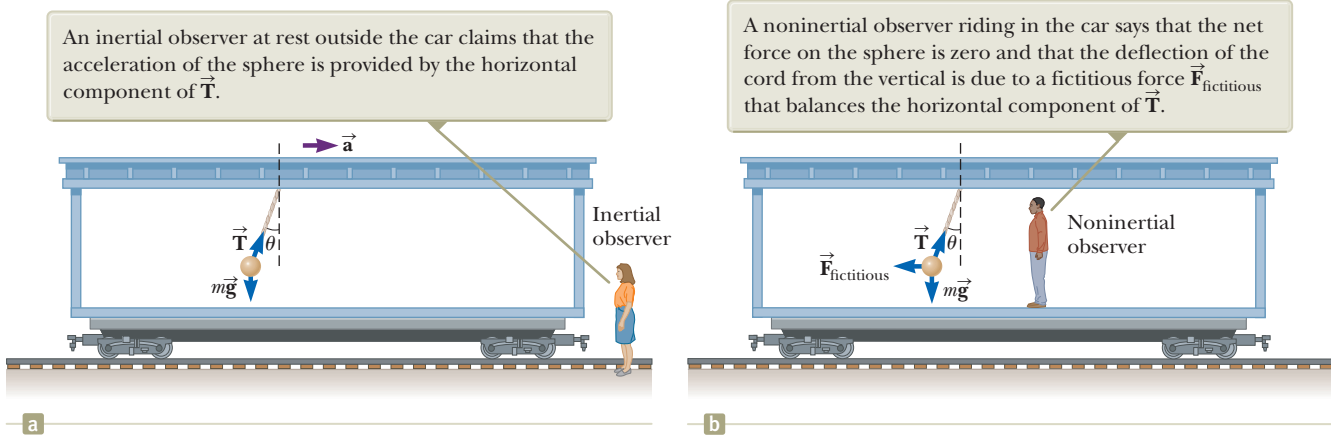


Figure 6.12 (Example 6.7) A small sphere suspended from the ceiling of a boxcar accelerating to the right is deflected as shown.

Categorize For the inertial observer, we model the sphere as a *particle under a net force* in the horizontal direction and a *particle in equilibrium* in the vertical direction. For the noninertial observer, the sphere is modeled as a *particle in equilibrium* in both directions.

Analyze According to the inertial observer at rest (Fig. 6.12a), the forces on the sphere are the force \vec{T} exerted by the cord and the gravitational force. The inertial observer concludes that the sphere's acceleration is the same as that of the boxcar and that this acceleration is provided by the horizontal component of \vec{T} .

For this observer, apply the particle under a net force and particle in equilibrium models:

$$\text{Inertial observer} \quad \begin{cases} (1) \quad \sum F_x = T \sin \theta = ma \\ (2) \quad \sum F_y = T \cos \theta - mg = 0 \end{cases}$$

According to the noninertial observer riding in the car (Fig. 6.12b), the cord also makes an angle θ with the vertical; to that observer, however, the sphere is at rest and so its acceleration is zero. Therefore, the noninertial observer introduces a force (which we know to be fictitious) in the horizontal direction to balance the horizontal component of \vec{T} and claims that the net force on the sphere is zero.

Apply the particle in equilibrium model for this observer in both directions:

$$\text{Noninertial observer} \quad \begin{cases} \sum F'_x = T \sin \theta - F_{\text{fictitious}} = 0 \\ \sum F'_y = T \cos \theta - mg = 0 \end{cases}$$

These expressions are equivalent to Equations (1) and (2) if $F_{\text{fictitious}} = ma$, where a is the acceleration according to the inertial observer.

Finalize If we make this substitution in the equation for $\sum F'_x$ above, we obtain the same mathematical results as the inertial observer. The physical interpretation of the cord's deflection, however, differs in the two frames of reference.

WHAT IF? Suppose the inertial observer wants to measure the acceleration of the train by means of the pendulum (the sphere hanging from the cord). How could she do so?

Answer Our intuition tells us that the angle θ the cord makes with the vertical should increase as the acceleration increases. By solving Equations (1) and (2) simultaneously for a , we find that $a = g \tan \theta$. Therefore, the inertial observer can determine the magnitude of the car's acceleration by measuring the angle θ and using that relationship. Because the deflection of the cord from the vertical serves as a measure of acceleration, *a simple pendulum can be used as an accelerometer.*

6.4 Motion in the Presence of Resistive Forces

In Chapter 5, we described the force of kinetic friction exerted on an object moving on some surface. We completely ignored any interaction between the object and the medium through which it moves. Now consider the effect of that medium, which

can be either a liquid or a gas. The medium exerts a **resistive force** $\vec{\mathbf{R}}$ on the object moving through it. Some examples are the air resistance associated with moving vehicles (sometimes called *air drag*) and the viscous forces that act on objects moving through a liquid. The magnitude of $\vec{\mathbf{R}}$ depends on factors such as the speed of the object, and the direction of $\vec{\mathbf{R}}$ is always opposite the direction of the object's motion relative to the medium. This direction may or may not be in the direction opposite the object's velocity according to the observer. For example, if a marble is dropped into a bottle of shampoo, the marble moves downward and the resistive force is upward, resisting the falling of the marble. In contrast, imagine the moment at which there is no wind and you are looking at a flag hanging limply on a flagpole. When a breeze begins to blow toward the right, the flag moves toward the right. In this case, the drag force on the flag from the moving air is to the right and the motion of the flag in response is also to the right, the *same* direction as the drag force. Because the air moves toward the right with respect to the flag, the flag moves to the left relative to the air. Therefore, the direction of the drag force is indeed opposite to the direction of the motion of the flag with respect to the air!

The magnitude of the resistive force can depend on speed in a complex way, and here we consider only two simplified models. In the first model, we assume the resistive force is proportional to the velocity of the moving object; this model is valid for objects falling slowly through a liquid and for very small objects, such as dust particles, moving through air. In the second model, we assume a resistive force that is proportional to the square of the speed of the moving object; large objects, such as skydivers moving through air in free fall, experience such a force.

Model 1: Resistive Force Proportional to Object Velocity

If we model the resistive force acting on an object moving through a liquid or gas as proportional to the object's velocity, the resistive force can be expressed as

$$\vec{\mathbf{R}} = -b\vec{\mathbf{v}} \quad (6.2)$$

where b is a constant whose value depends on the properties of the medium and on the shape and dimensions of the object and $\vec{\mathbf{v}}$ is the velocity of the object relative to the medium. The negative sign indicates that $\vec{\mathbf{R}}$ is in the opposite direction to $\vec{\mathbf{v}}$.

Consider a small sphere of mass m released from rest in a liquid as in Figure 6.13a. Assuming the only forces acting on the sphere are the resistive force $\vec{\mathbf{R}} = -b\vec{\mathbf{v}}$ and the gravitational force $\vec{\mathbf{F}}_g$, let us describe its motion.¹ We model the sphere as a par-

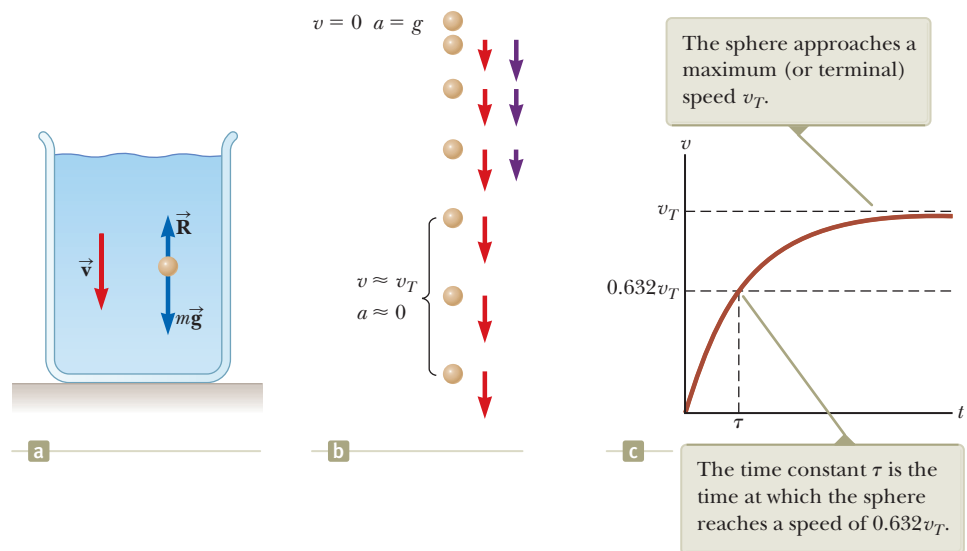


Figure 6.13 (a) A small sphere falling through a liquid. (b) A motion diagram of the sphere as it falls. Velocity vectors (red) and acceleration vectors (violet) are shown for each image after the first one. (c) A speed–time graph for the sphere.

¹A *buoyant force* is also acting on the submerged object. This force is constant, and its magnitude is equal to the weight of the displaced liquid. This force can be modeled by changing the apparent weight of the sphere by a constant factor, so we will ignore the force here. We will discuss buoyant forces in Chapter 14.

circle under a net force. Applying Newton's second law to the vertical motion of the sphere and choosing the downward direction to be positive, we obtain

$$\sum F_y = ma \rightarrow mg - bv = ma \quad (6.3)$$

where the acceleration of the sphere is downward. Noting that the acceleration a is equal to dv/dt gives

$$\frac{dv}{dt} = g - \frac{b}{m}v \quad (6.4)$$

This equation is called a *differential equation*, and the methods of solving it may not be familiar to you as yet. Notice, however, that initially when $v = 0$, the magnitude of the resistive force is also zero and the acceleration of the sphere is simply g . As t increases, the magnitude of the resistive force increases and the acceleration decreases. The acceleration approaches zero when the magnitude of the resistive force approaches the sphere's weight so that the net force on the sphere is zero. In this situation, the speed of the sphere approaches its **terminal speed** v_T .

◀ Terminal speed

The terminal speed is obtained from Equation 6.4 by setting $dv/dt = 0$, which gives

$$mg - bv_T = 0 \quad \text{or} \quad v_T = \frac{mg}{b} \quad (6.5)$$

Because you may not be familiar with differential equations yet, we won't show the details of the process that gives the expression for v for all times t . If $v = 0$ at $t = 0$, this expression is

$$v = \frac{mg}{b}(1 - e^{-bt/m}) = v_T(1 - e^{-t/\tau}) \quad (6.6)$$

This function is plotted in Figure 6.13c. The symbol e represents the base of the natural logarithm and is also called *Euler's number*: $e = 2.718\ 28$. The **time constant** $\tau = m/b$ (Greek letter tau) is the time at which the sphere released from rest at $t = 0$ reaches 63.2% of its terminal speed; when $t = \tau$, Equation 6.6 yields $v = 0.632v_T$. (The number 0.632 is $1 - e^{-1}$.)

We can check that Equation 6.6 is a solution to Equation 6.4 by direct differentiation:

$$\frac{dv}{dt} = \frac{d}{dt} \left[\frac{mg}{b}(1 - e^{-bt/m}) \right] = \frac{mg}{b} \left(0 + \frac{b}{m} e^{-bt/m} \right) = g e^{-bt/m}$$

(See Appendix Table B.4 for the derivative of e raised to some power.) Substituting into Equation 6.4 both this expression for dv/dt and the expression for v given by Equation 6.6 shows that our solution satisfies the differential equation.

Example 6.8

Sphere Falling in Oil AM

A small sphere of mass 2.00 g is released from rest in a large vessel filled with oil, where it experiences a resistive force proportional to its speed. The sphere reaches a terminal speed of 5.00 cm/s. Determine the time constant τ and the time at which the sphere reaches 90.0% of its terminal speed.

SOLUTION

Conceptualize With the help of Figure 6.13, imagine dropping the sphere into the oil and watching it sink to the bottom of the vessel. If you have some thick shampoo in a clear container, drop a marble in it and observe the motion of the marble.

Categorize We model the sphere as a *particle under a net force*, with one of the forces being a resistive force that depends on the speed of the sphere. This model leads to the result in Equation 6.5.

Analyze From Equation 6.5, evaluate the coefficient b : $b = \frac{mg}{v_T}$

continued

6.8 continued

Evaluate the time constant τ :

$$\tau = \frac{m}{b} = m \left(\frac{v_T}{mg} \right) = \frac{v_T}{g}$$

Substitute numerical values:

$$\tau = \frac{5.00 \text{ cm/s}}{980 \text{ cm/s}^2} = 5.10 \times 10^{-3} \text{ s}$$

Find the time t at which the sphere reaches a speed of $0.900v_T$ by setting $v = 0.900v_T$ in Equation 6.6 and solving for t :

$$0.900v_T = v_T(1 - e^{-t/\tau})$$

$$1 - e^{-t/\tau} = 0.900$$

$$e^{-t/\tau} = 0.100$$

$$-\frac{t}{\tau} = \ln(0.100) = -2.30$$

$$t = 2.30\tau = 2.30(5.10 \times 10^{-3} \text{ s}) = 11.7 \times 10^{-3} \text{ s}$$

$$= \boxed{11.7 \text{ ms}}$$

Finalize The sphere reaches 90.0% of its terminal speed in a very short time interval. You should have also seen this behavior if you performed the activity with the marble and the shampoo. Because of the short time interval required to reach terminal velocity, you may not have noticed the time interval at all. The marble may have appeared to immediately begin moving through the shampoo at a constant velocity.

Model 2: Resistive Force Proportional to Object Speed Squared

For objects moving at high speeds through air, such as airplanes, skydivers, cars, and baseballs, the resistive force is reasonably well modeled as proportional to the square of the speed. In these situations, the magnitude of the resistive force can be expressed as

$$R = \frac{1}{2}D\rho Av^2 \quad (6.7)$$

where D is a dimensionless empirical quantity called the *drag coefficient*, ρ is the density of air, and A is the cross-sectional area of the moving object measured in a plane perpendicular to its velocity. The drag coefficient has a value of about 0.5 for spherical objects but can have a value as great as 2 for irregularly shaped objects.

Let us analyze the motion of a falling object subject to an upward air resistive force of magnitude $R = \frac{1}{2}D\rho Av^2$. Suppose an object of mass m is released from rest. As Figure 6.14 shows, the object experiences two external forces:² the downward gravitational force $\vec{F}_g = m\vec{g}$ and the upward resistive force \vec{R} . Hence, the magnitude of the net force is

$$\sum F = mg - \frac{1}{2}D\rho Av^2 \quad (6.8)$$

where we have taken downward to be the positive vertical direction. Modeling the object as a particle under a net force, with the net force given by Equation 6.8, we find that the object has a downward acceleration of magnitude

$$a = g - \left(\frac{D\rho A}{2m} \right) v^2 \quad (6.9)$$

We can calculate the terminal speed v_T by noticing that when the gravitational force is balanced by the resistive force, the net force on the object is zero and therefore its acceleration is zero. Setting $a = 0$ in Equation 6.9 gives

$$g - \left(\frac{D\rho A}{2m} \right) v_T^2 = 0$$

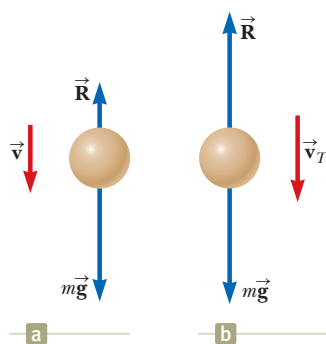


Figure 6.14 (a) An object falling through air experiences a resistive force \vec{R} and a gravitational force $\vec{F}_g = m\vec{g}$. (b) The object reaches terminal speed when the net force acting on it is zero, that is, when $\vec{R} = -\vec{F}_g$ or $R = mg$.

²As with Model 1, there is also an upward buoyant force that we neglect.

Table 6.1 Terminal Speed for Various Objects Falling Through Air

Object	Mass (kg)	Cross-Sectional Area (m ²)	v_T (m/s)
Skydiver	75	0.70	60
Baseball (radius 3.7 cm)	0.145	4.2×10^{-3}	43
Golf ball (radius 2.1 cm)	0.046	1.4×10^{-3}	44
Hailstone (radius 0.50 cm)	4.8×10^{-4}	7.9×10^{-5}	14
Raindrop (radius 0.20 cm)	3.4×10^{-5}	1.3×10^{-5}	9.0

so

$$v_T = \sqrt{\frac{2mg}{D\rho A}} \quad (6.10)$$

Table 6.1 lists the terminal speeds for several objects falling through air.

- Quick Quiz 6.4** A baseball and a basketball, having the same mass, are dropped through air from rest such that their bottoms are initially at the same height above the ground, on the order of 1 m or more. Which one strikes the ground first? (a) The baseball strikes the ground first. (b) The basketball strikes the ground first. (c) Both strike the ground at the same time.

Conceptual Example 6.9

The Skysurfer

Consider a skysurfer (Fig. 6.15) who jumps from a plane with his feet attached firmly to his surfboard, does some tricks, and then opens his parachute. Describe the forces acting on him during these maneuvers.

SOLUTION

When the surfer first steps out of the plane, he has no vertical velocity. The downward gravitational force causes him to accelerate toward the ground. As his downward speed increases, so does the upward resistive force exerted by the air on his body and the board. This upward force reduces their acceleration, and so their speed increases more slowly. Eventually, they are going so fast that the upward resistive force matches the downward gravitational force. Now the net force is zero and they no longer accelerate, but instead reach their terminal speed. At some point after reaching terminal speed, he opens his parachute, resulting in a drastic increase in the upward resistive force. The net force (and therefore the acceleration) is now upward, in the direction opposite the direction of the velocity. The downward velocity therefore decreases rapidly, and the resistive force on the parachute also decreases. Eventually, the upward resistive force and the downward gravitational force balance each other again and a much smaller terminal speed is reached, permitting a safe landing.

(Contrary to popular belief, the velocity vector of a skydiver never points upward. You may have seen a video in which a skydiver appears to “rocket” upward once the parachute opens. In fact, what happens is that the skydiver slows down but the person holding the camera continues falling at high speed.)



Oliver Furrer/Jupiter Images

Figure 6.15 (Conceptual Example 6.9) A skysurfer.

Example 6.10

Falling Coffee Filters

AM

The dependence of resistive force on the square of the speed is a simplification model. Let's test the model for a specific situation. Imagine an experiment in which we drop a series of bowl-shaped, pleated coffee filters and measure their terminal speeds. Table 6.2 on page 166 presents typical terminal speed data from a real experiment using these coffee filters as

continued

6.10 continued

they fall through the air. The time constant τ is small, so a dropped filter quickly reaches terminal speed. Each filter has a mass of 1.64 g. When the filters are nested together, they combine in such a way that the front-facing surface area does not increase. Determine the relationship between the resistive force exerted by the air and the speed of the falling filters.

SOLUTION

Conceptualize Imagine dropping the coffee filters through the air. (If you have some coffee filters, try dropping them.) Because of the relatively small mass of the coffee filter, you probably won't notice the time interval during which there is an acceleration. The filters will appear to fall at constant velocity immediately upon leaving your hand.

Categorize Because a filter moves at constant velocity, we model it as a *particle in equilibrium*.

Analyze At terminal speed, the upward resistive force on the filter balances the downward gravitational force so that $R = mg$.

Evaluate the magnitude of the resistive force:

$$R = mg = (1.64 \text{ g}) \left(\frac{1 \text{ kg}}{1000 \text{ g}} \right) (9.80 \text{ m/s}^2) = 0.0161 \text{ N}$$

Likewise, two filters nested together experience 0.0322 N of resistive force, and so forth. These values of resistive force are shown in the far right column of Table 6.2. A graph of the resistive force on the filters as a function of terminal speed is shown in Figure 6.16a. A straight line is not a good fit, indicating that the resistive force is *not* proportional to the speed. The behavior is more clearly seen in Figure 6.16b, in which the resistive force is plotted as a function of the square of the terminal speed. This graph indicates that the resistive force is proportional to the *square* of the speed as suggested by Equation 6.7.

Finalize Here is a good opportunity for you to take some actual data at home on real coffee filters and see if you can reproduce the results shown in Figure 6.16. If you have shampoo and a marble as mentioned in Example 6.8, take data on that system too and see if the resistive force is appropriately modeled as being proportional to the speed.

Table 6.2 Terminal Speed and Resistive Force for Nested Coffee Filters

Number of Filters	v_T (m/s) ^a	R (N)
1	1.01	0.0161
2	1.40	0.0322
3	1.63	0.0483
4	2.00	0.0644
5	2.25	0.0805
6	2.40	0.0966
7	2.57	0.1127
8	2.80	0.1288
9	3.05	0.1449
10	3.22	0.1610

^aAll values of v_T are approximate.

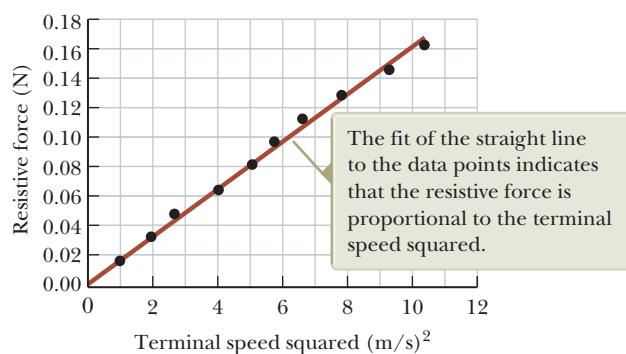
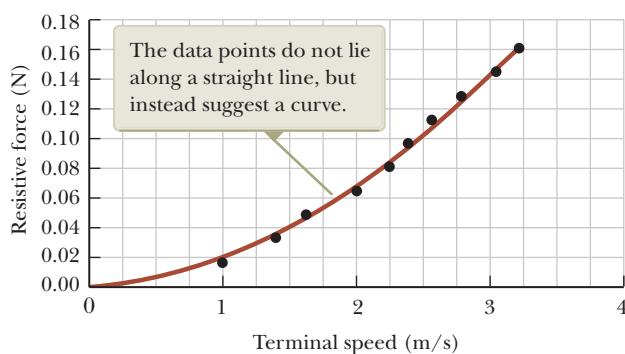


Figure 6.16 (Example 6.10) (a) Relationship between the resistive force acting on falling coffee filters and their terminal speed. (b) Graph relating the resistive force to the square of the terminal speed.

Example 6.11 Resistive Force Exerted on a Baseball

AM

A pitcher hurls a 0.145-kg baseball past a batter at 40.2 m/s (= 90 mi/h). Find the resistive force acting on the ball at this speed.

6.11 continued

SOLUTION

Conceptualize This example is different from the previous ones in that the object is now moving horizontally through the air instead of moving vertically under the influence of gravity and the resistive force. The resistive force causes the ball to slow down, and gravity causes its trajectory to curve downward. We simplify the situation by assuming the velocity vector is exactly horizontal at the instant it is traveling at 40.2 m/s.

Categorize In general, the ball is a *particle under a net force*. Because we are considering only one instant of time, however, we are not concerned about acceleration, so the problem involves only finding the value of one of the forces.

Analyze To determine the drag coefficient D , imagine that we drop the baseball and allow it to reach terminal speed. Solve Equation 6.10 for D :

$$D = \frac{2mg}{v_T^2 \rho A}$$

Use this expression for D in Equation 6.7 to find an expression for the magnitude of the resistive force:

$$R = \frac{1}{2} D \rho A v^2 = \frac{1}{2} \left(\frac{2mg}{v_T^2 \rho A} \right) \rho A v^2 = mg \left(\frac{v}{v_T} \right)^2$$

Substitute numerical values, using the terminal speed from Table 6.1:

$$R = (0.145 \text{ kg})(9.80 \text{ m/s}^2) \left(\frac{40.2 \text{ m/s}}{43 \text{ m/s}} \right)^2 = 1.2 \text{ N}$$

Finalize The magnitude of the resistive force is similar in magnitude to the weight of the baseball, which is about 1.4 N. Therefore, air resistance plays a major role in the motion of the ball, as evidenced by the variety of curve balls, floaters, sinkers, and the like thrown by baseball pitchers.

Summary

Concepts and Principles

A particle moving in uniform circular motion has a centripetal acceleration; this acceleration must be provided by a net force directed toward the center of the circular path.

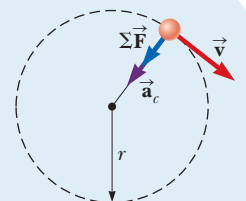
An observer in a noninertial (accelerating) frame of reference introduces **fictitious forces** when applying Newton's second law in that frame.

An object moving through a liquid or gas experiences a speed-dependent **resistive force**. This resistive force is in a direction opposite that of the velocity of the object relative to the medium and generally increases with speed. The magnitude of the resistive force depends on the object's size and shape and on the properties of the medium through which the object is moving. In the limiting case for a falling object, when the magnitude of the resistive force equals the object's weight, the object reaches its **terminal speed**.

Analysis Model for Problem-Solving

Particle in Uniform Circular Motion (Extension) With our new knowledge of forces, we can extend the model of a particle in uniform circular motion, first introduced in Chapter 4. Newton's second law applied to a particle moving in uniform circular motion states that the net force causing the particle to undergo a centripetal acceleration (Eq. 4.14) is related to the acceleration according to

$$\sum F = ma_c = m \frac{v^2}{r} \quad (6.1)$$



Objective Questions

1. denotes answer available in *Student Solutions Manual/Study Guide*

- 1.** A child is practicing for a BMX race. His speed remains constant as he goes counterclockwise around a level track with two straight sections and two nearly semicircular sections as shown in the aerial view of Figure OQ6.1. (a) Rank the magnitudes of his acceleration at the points *A*, *B*, *C*, *D*, and *E* from largest to smallest. If his acceleration is the same size at two points, display that fact in your ranking. If his acceleration is zero, display that fact. (b) What are the directions of his velocity at points *A*, *B*, and *C*? For each point, choose one: north, south, east, west, or nonexistent. (c) What are the directions of his acceleration at points *A*, *B*, and *C*?

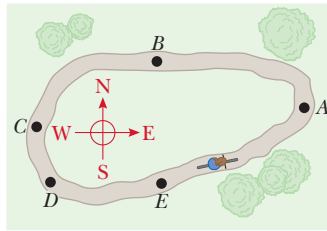


Figure OQ6.1

- 2.** Consider a skydiver who has stepped from a helicopter and is falling through air. Before she reaches terminal speed and long before she opens her parachute, does her speed (a) increase, (b) decrease, or (c) stay constant?
- 3.** A door in a hospital has a pneumatic closer that pulls the door shut such that the doorknob moves with constant speed over most of its path. In this part of its motion, (a) does the doorknob experience a centripetal acceleration? (b) Does it experience a tangential acceleration?
- 4.** A pendulum consists of a small object called a bob hanging from a light cord of fixed length, with the top end of the cord fixed, as represented in Figure OQ6.4. The bob moves without friction, swinging equally high on both sides. It moves from its turning point *A* through point *B* and reaches its maximum speed at point *C*. (a) Of these points, is there a point where the bob has nonzero radial acceleration and zero tangential acceleration? If so, which point? What is the

direction of its total acceleration at this point? (b) Of these points, is there a point where the bob has nonzero tangential acceleration and zero radial acceleration? If so, which point? What is the direction of its total acceleration at this point? (c) Is there a point where the bob has no acceleration? If so, which point? (d) Is there a point where the bob has both nonzero tangential and radial acceleration? If so, which point? What is the direction of its total acceleration at this point?

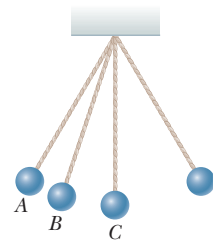


Figure OQ6.4

- 5.** As a raindrop falls through the atmosphere, its speed initially changes as it falls toward the Earth. Before the raindrop reaches its terminal speed, does the magnitude of its acceleration (a) increase, (b) decrease, (c) stay constant at zero, (d) stay constant at 9.80 m/s^2 , or (e) stay constant at some other value?
- 6.** An office door is given a sharp push and swings open against a pneumatic device that slows the door down and then reverses its motion. At the moment the door is open the widest, (a) does the doorknob have a centripetal acceleration? (b) Does it have a tangential acceleration?
- 7.** Before takeoff on an airplane, an inquisitive student on the plane dangles an iPod by its earphone wire. It hangs straight down as the plane is at rest waiting to take off. The plane then gains speed rapidly as it moves down the runway. (i) Relative to the student's hand, does the iPod (a) shift toward the front of the plane, (b) continue to hang straight down, or (c) shift toward the back of the plane? (ii) The speed of the plane increases at a constant rate over a time interval of several seconds. During this interval, does the angle the earphone wire makes with the vertical (a) increase, (b) stay constant, or (c) decrease?

Conceptual Questions

1. denotes answer available in *Student Solutions Manual/Study Guide*

- 1.** What forces cause (a) an automobile, (b) a propeller-driven airplane, and (c) a rowboat to move?
- 2.** A falling skydiver reaches terminal speed with her parachute closed. After the parachute is opened, what parameters change to decrease this terminal speed?
- 3.** An object executes circular motion with constant speed whenever a net force of constant magnitude acts perpendicular to the velocity. What happens to the speed if the force is not perpendicular to the velocity?
- 4.** Describe the path of a moving body in the event that (a) its acceleration is constant in magnitude at all times and perpendicular to the velocity, and (b) its accelera-

tion is constant in magnitude at all times and parallel to the velocity.

- 5.** The observer in the accelerating elevator of Example 5.8 would claim that the "weight" of the fish is T , the scale reading, but this answer is obviously wrong. Why does this observation differ from that of a person outside the elevator, at rest with respect to the Earth?
- 6.** If someone told you that astronauts are weightless in orbit because they are beyond the pull of gravity, would you accept the statement? Explain.
- 7.** It has been suggested that rotating cylinders about 20 km in length and 8 km in diameter be placed in

- space and used as colonies. The purpose of the rotation is to simulate gravity for the inhabitants. Explain this concept for producing an effective imitation of gravity.
- Consider a small raindrop and a large raindrop falling through the atmosphere. (a) Compare their terminal speeds. (b) What are their accelerations when they reach terminal speed?
 - Why does a pilot tend to black out when pulling out of a steep dive?
 - A pail of water can be whirled in a vertical path such that no water is spilled. Why does the water stay in the pail, even when the pail is above your head?
 - “If the current position and velocity of every particle in the Universe were known, together with the laws describing the forces that particles exert on one another, the whole future of the Universe could be calculated. The future is determinate and preordained. Free will is an illusion.” Do you agree with this thesis? Argue for or against it.

Problems

WebAssign

The problems found in this chapter may be assigned online in Enhanced WebAssign

- straightforward; 2. intermediate; 3. challenging

1. full solution available in the *Student Solutions Manual/Study Guide*

AMT Analysis Model tutorial available in Enhanced WebAssign

GP Guided Problem

M Master It tutorial available in Enhanced WebAssign

W Watch It video solution available in Enhanced WebAssign

Section 6.1 Extending the Particle in Uniform Circular Motion Model

- A light string can support a stationary hanging load of 25.0 kg before breaking. An object of mass $m = 3.00$ kg attached to the string rotates on a frictionless, horizontal table in a circle of radius $r = 0.800$ m, and the other end of the string is held fixed as in Figure P6.1. What range of speeds can the object have before the string breaks?

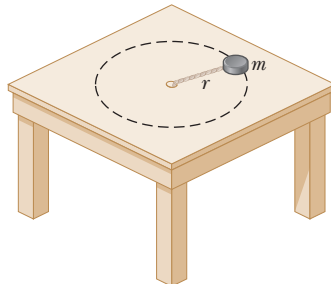


Figure P6.1

- Whenever two *Apollo* astronauts were on the surface of the Moon, a third astronaut orbited the Moon. Assume the orbit to be circular and 100 km above the surface of the Moon, where the acceleration due to gravity is 1.52 m/s². The radius of the Moon is 1.70×10^6 m. Determine (a) the astronaut's orbital speed and (b) the period of the orbit.
- In the Bohr model of the hydrogen atom, an electron moves in a circular path around a proton. The speed of the electron is approximately 2.20×10^6 m/s. Find (a) the force acting on the electron as it revolves in a circular orbit of radius 0.529×10^{-10} m and (b) the centripetal acceleration of the electron.
- A curve in a road forms part of a horizontal circle. As a car goes around it at constant speed 14.0 m/s, the total horizontal force on the driver has magnitude 130 N.

What is the total horizontal force on the driver if the speed on the same curve is 18.0 m/s instead?

- In a cyclotron (one type of particle accelerator), a deuteron (of mass 2.00 u) reaches a final speed of 10.0% of the speed of light while moving in a circular path of radius 0.480 m. What magnitude of magnetic force is required to maintain the deuteron in a circular path?

- A car initially traveling eastward turns north by traveling in a circular path at uniform speed as shown in Figure P6.6. The length of the arc ABC is 235 m, and the car completes the turn in 36.0 s. (a) What is the acceleration when the car is at B located at an angle of 35.0° ? Express your answer in terms of the unit vectors \hat{i} and \hat{j} . Determine (b) the car's average speed and (c) its average acceleration during the 36.0-s interval.

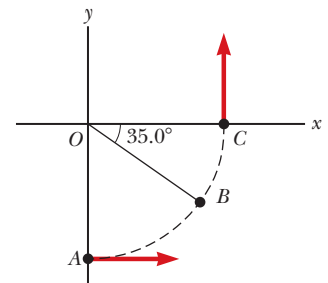


Figure P6.6

- A space station, in the form of a wheel 120 m in diameter, rotates to provide an “artificial gravity” of 3.00 m/s² for persons who walk around on the inner wall of the outer rim. Find the rate of the wheel's rotation in revolutions per minute that will produce this effect.
- Consider a conical pendulum (Fig. P6.8) with a bob of mass $m = 80.0$ kg on a string of length $L = 10.0$ m that makes an angle of $\theta = 5.00^\circ$ with the vertical. Determine (a) the horizontal and vertical components of the

force exerted by the string on the pendulum and (b) the radial acceleration of the bob.

- 9.** A coin placed 30.0 cm from the center of a rotating, horizontal turntable slips when its speed is 50.0 cm/s. (a) What force causes the centripetal acceleration when the coin is stationary relative to the turntable? (b) What is the coefficient of static friction between coin and turntable?

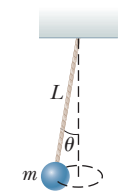


Figure P6.8

- 10.** Why is the following situation impossible? The object of mass $m = 4.00$ kg in Figure P6.10 is attached to a vertical rod by two strings of length $\ell = 2.00$ m. The strings are attached to the rod at points a distance $d = 3.00$ m apart. The object rotates in a horizontal circle at a constant speed of $v = 3.00$ m/s, and the strings remain taut. The rod rotates along with the object so that the strings do not wrap onto the rod. **What If?** Could this situation be possible on another planet?

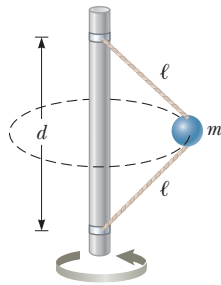


Figure P6.10

- 11.** A crate of eggs is located in the middle of the flatbed of a pickup truck as the truck negotiates a curve in the flat road. The curve may be regarded as an arc of a circle of radius 35.0 m. If the coefficient of static friction between crate and truck is 0.600, how fast can the truck be moving without the crate sliding?

Section 6.2 Nonuniform Circular Motion

- 12.** A pail of water is rotated in a vertical circle of radius 1.00 m. (a) What two external forces act on the water in the pail? (b) Which of the two forces is most important in causing the water to move in a circle? (c) What is the pail's minimum speed at the top of the circle if no water is to spill out? (d) Assume the pail with the speed found in part (c) were to suddenly disappear at the top of the circle. Describe the subsequent motion of the water. Would it differ from the motion of a projectile?

- 13.** A hawk flies in a horizontal arc of radius 12.0 m at constant speed 4.00 m/s. (a) Find its centripetal acceleration. (b) It continues to fly along the same horizontal arc, but increases its speed at the rate of 1.20 m/s². Find the acceleration (magnitude and direction) in this situation at the moment the hawk's speed is 4.00 m/s.

- 14.** A 40.0-kg child swings in a swing supported by two chains, each 3.00 m long. The tension in each chain at the lowest point is 350 N. Find (a) the child's speed at the lowest point and (b) the force exerted by the seat on the child at the lowest point. (Ignore the mass of the seat.)

- 15.** A child of mass m swings in a swing supported by two chains, each of length R . If the tension in each chain at the lowest point is T , find (a) the child's speed at the lowest point and (b) the force exerted by the seat on the child at the lowest point. (Ignore the mass of the seat.)

- 16.** A roller-coaster car (Fig. P6.16) has a mass of 500 kg when fully loaded with passengers. The path of the coaster from its initial point shown in the figure to point **B** involves only up-and-down motion (as seen by the riders), with no motion to the left or right. (a) If the vehicle has a speed of 20.0 m/s at point **A**, what is the force exerted by the track on the car at this point? (b) What is the maximum speed the vehicle can have at point **B** and still remain on the track? Assume the roller-coaster tracks at points **A** and **B** are parts of vertical circles of radius $r_1 = 10.0$ m and $r_2 = 15.0$ m, respectively.

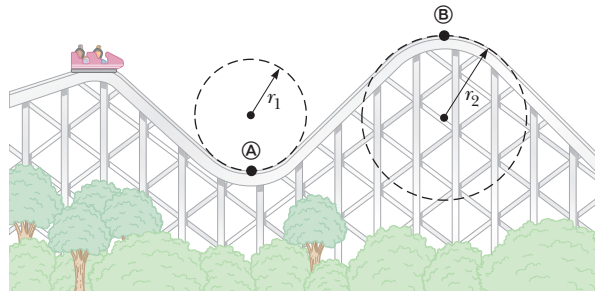


Figure P6.16 Problems 16 and 38.

- 17.** A roller coaster at the Six Flags Great America amusement park in Gurnee, Illinois, incorporates some clever design technology and some basic physics. Each vertical loop, instead of being circular, is shaped like a teardrop (Fig. P6.17). The cars ride on the inside of the loop at the top, and the speeds are fast enough to ensure the cars remain on the track.



Figure P6.17

The biggest loop is 40.0 m high. Suppose the speed at the top of the loop is 13.0 m/s and the corresponding centripetal acceleration of the riders is $2g$. (a) What is the radius of the arc of the teardrop at the top? (b) If the total mass of a car plus the riders is M , what force does the rail exert on the car at the top? (c) Suppose the roller coaster had a circular loop of radius 20.0 m. If the cars have the same speed, 13.0 m/s at the top, what is the centripetal acceleration of the riders at the top? (d) Comment on the normal force at the top in the situation described in part (c) and on the advantages of having teardrop-shaped loops.

- 18.** One end of a cord is fixed and a small 0.500-kg object is attached to the other end, where it swings in a section of a vertical circle of radius 2.00 m as shown in Figure P6.18. When $\theta = 20.0^\circ$, the speed of the object is 8.00 m/s. At this instant, find (a) the tension in the string, (b) the tangential and radial components of acceleration, and (c) the total acceleration. (d) Is your answer changed if the object is swinging down toward its

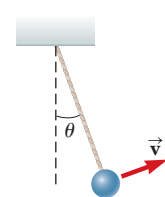


Figure P6.18

lowest point instead of swinging up? (e) Explain your answer to part (d).

19. An adventurous archeologist ($m = 85.0$ kg) tries to cross a river by swinging from a vine. The vine is 10.0 m long, and his speed at the bottom of the swing is 8.00 m/s. The archeologist doesn't know that the vine has a breaking strength of $1\,000$ N. Does he make it across the river without falling in?

Section 6.3 Motion in Accelerated Frames

20. An object of mass $m = 5.00$ kg, attached to a spring scale, rests on a frictionless, horizontal surface as shown in Figure P6.20. The spring scale, attached to the front end of a boxcar, reads zero when the car is at rest. (a) Determine the acceleration of the car if the spring scale has a constant reading of 18.0 N when the car is in motion. (b) What constant reading will the spring scale show if the car moves with constant velocity? Describe the forces on the object as observed (c) by someone in the car and (d) by someone at rest outside the car.

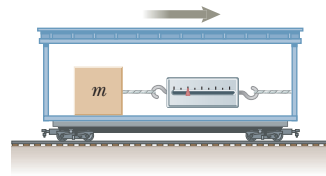


Figure P6.20

21. An object of mass $m = 0.500$ kg is suspended from the ceiling of an accelerating truck as shown in Figure P6.21. Taking $a = 3.00$ m/s², find (a) the angle θ that the string makes with the vertical and (b) the tension T in the string.

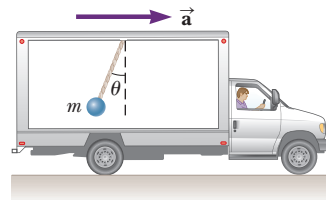


Figure P6.21

22. A child lying on her back experiences 55.0 N tension in the muscles on both sides of her neck when she raises her head to look past her toes. Later, sliding feet first down a water slide at terminal speed 5.70 m/s and riding high on the outside wall of a horizontal curve of radius 2.40 m, she raises her head again to look forward past her toes. Find the tension in the muscles on both sides of her neck while she is sliding.
23. A person stands on a scale in an elevator. As the elevator starts, the scale has a constant reading of 591 N. As the elevator later stops, the scale reading is 391 N. Assuming the magnitude of the acceleration is the same during starting and stopping, determine (a) the weight of the person, (b) the person's mass, and (c) the acceleration of the elevator.
24. **Review.** A student, along with her backpack on the floor next to her, are in an elevator that is accelerating upward with acceleration a . The student gives her backpack a quick kick at $t = 0$, imparting to it speed v and causing it to slide across the elevator floor. At time t , the backpack hits the opposite wall a distance L away from the student. Find the coefficient

of kinetic friction μ_k between the backpack and the elevator floor.

25. A small container of water is placed on a turntable inside a microwave oven, at a radius of 12.0 cm from the center. The turntable rotates steadily, turning one revolution in each 7.25 s. What angle does the water surface make with the horizontal?

Section 6.4 Motion in the Presence of Resistive Forces

26. **Review.** (a) Estimate the terminal speed of a wooden sphere (density 0.830 g/cm³) falling through air, taking its radius as 8.00 cm and its drag coefficient as 0.500 . (b) From what height would a freely falling object reach this speed in the absence of air resistance?
27. The mass of a sports car is $1\,200$ kg. The shape of the body is such that the aerodynamic drag coefficient is 0.250 and the frontal area is 2.20 m². Ignoring all other sources of friction, calculate the initial acceleration the car has if it has been traveling at 100 km/h and is now shifted into neutral and allowed to coast.
28. A skydiver of mass 80.0 kg jumps from a slow-moving aircraft and reaches a terminal speed of 50.0 m/s. (a) What is her acceleration when her speed is 30.0 m/s? What is the drag force on the skydiver when her speed is (b) 50.0 m/s and (c) 30.0 m/s?
29. Calculate the force required to pull a copper ball of radius 2.00 cm upward through a fluid at the constant speed 9.00 cm/s. Take the drag force to be proportional to the speed, with proportionality constant 0.950 kg/s. Ignore the buoyant force.
30. A small piece of Styrofoam packing material is dropped from a height of 2.00 m above the ground. Until it reaches terminal speed, the magnitude of its acceleration is given by $a = g - Bv$. After falling 0.500 m, the Styrofoam effectively reaches terminal speed and then takes 5.00 s more to reach the ground. (a) What is the value of the constant B ? (b) What is the acceleration at $t = 0$? (c) What is the acceleration when the speed is 0.150 m/s?
31. A small, spherical bead of mass 3.00 g is released from rest at $t = 0$ from a point under the surface of a viscous liquid. The terminal speed is observed to be $v_T = 2.00$ cm/s. Find (a) the value of the constant b that appears in Equation 6.2, (b) the time t at which the bead reaches $0.632v_T$, and (c) the value of the resistive force when the bead reaches terminal speed.
32. At major league baseball games, it is commonplace to flash on the scoreboard a speed for each pitch. This speed is determined with a radar gun aimed by an operator positioned behind home plate. The gun uses the Doppler shift of microwaves reflected from the baseball, an effect we will study in Chapter 39. The gun determines the speed at some particular point on the baseball's path, depending on when the operator pulls the trigger. Because the ball is subject to a drag force due to air proportional to the square of its speed given by $R = kmv^2$, it slows as it travels 18.3 m toward the

plate according to the formula $v = v_i e^{-kx}$. Suppose the ball leaves the pitcher's hand at $90.0 \text{ mi/h} = 40.2 \text{ m/s}$. Ignore its vertical motion. Use the calculation of R for baseballs from Example 6.11 to determine the speed of the pitch when the ball crosses the plate.

33. Assume the resistive force acting on a speed skater is proportional to the square of the skater's speed v and is given by $f = -kmv^2$, where k is a constant and m is the skater's mass. The skater crosses the finish line of a straight-line race with speed v_i and then slows down by coasting on his skates. Show that the skater's speed at any time t after crossing the finish line is $v(t) = v_i/(1 + ktv_i)$.

34. **Review.** A window washer pulls a rubber squeegee down a very tall vertical window. The squeegee has mass 160 g and is mounted on the end of a light rod. The coefficient of kinetic friction between the squeegee and the dry glass is 0.900 . The window washer presses it against the window with a force having a horizontal component of 4.00 N . (a) If she pulls the squeegee down the window at constant velocity, what vertical force component must she exert? (b) The window washer increases the downward force component by 25.0% , while all other forces remain the same. Find the squeegee's acceleration in this situation. (c) The squeegee is moved into a wet portion of the window, where its motion is resisted by a fluid drag force R proportional to its velocity according to $R = -20.0v$, where R is in newtons and v is in meters per second. Find the terminal velocity that the squeegee approaches, assuming the window washer exerts the same force described in part (b).

35. A motorboat cuts its engine when its speed is 10.0 m/s and then coasts to rest. The equation describing the motion of the motorboat during this period is $v = v_i e^{-ct}$, where v is the speed at time t , v_i is the initial speed at $t = 0$, and c is a constant. At $t = 20.0 \text{ s}$, the speed is 5.00 m/s . (a) Find the constant c . (b) What is the speed at $t = 40.0 \text{ s}$? (c) Differentiate the expression for $v(t)$ and thus show that the acceleration of the boat is proportional to the speed at any time.

36. You can feel a force of air drag on your hand if you stretch your arm out of the open window of a speeding car. *Note:* Do not endanger yourself. What is the order of magnitude of this force? In your solution, state the quantities you measure or estimate and their values.

Additional Problems

37. A car travels clockwise at constant speed around a circular section of a horizontal road as shown in the aerial view of Figure P6.37. Find the directions of its velocity and acceleration at (a) position **A** and (b) position **B**.

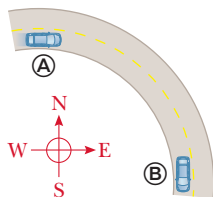


Figure P6.37

38. The mass of a roller-coaster car, including its passengers, is 500 kg . Its speed at the bottom of the track in Figure P6.16 is 19 m/s . The radius of this section of the track is

$r_1 = 25 \text{ m}$. Find the force that a seat in the roller-coaster car exerts on a 50-kg passenger at the lowest point.

39. A string under a tension of 50.0 N is used to whirl a rock in a horizontal circle of radius 2.50 m at a speed of 20.4 m/s on a frictionless surface as shown in Figure P6.39. As the string is pulled in, the speed of the rock increases. When the string on the table is 1.00 m long and the speed of the rock is 51.0 m/s , the string breaks. What is the breaking strength, in newtons, of the string?

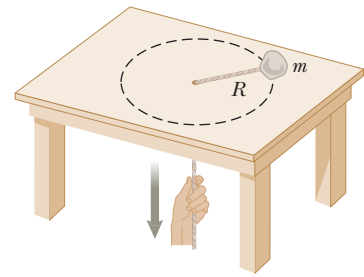


Figure P6.39

40. Disturbed by speeding cars outside his workplace, Nobel laureate Arthur Holly Compton designed a speed bump (called the "Holly hump") and had it installed. Suppose a 1800-kg car passes over a hump in a roadway that follows the arc of a circle of radius 20.4 m as shown in Figure P6.40. (a) If the car travels at 30.0 km/h , what force does the road exert on the car as the car passes the highest point of the hump?



Figure P6.40

Problems 40 and 41.

- (b) **What If?** What is the maximum speed the car can have without losing contact with the road as it passes this highest point?
41. A car of mass m passes over a hump in a road that follows the arc of a circle of radius R as shown in Figure P6.40. (a) If the car travels at a speed v , what force does the road exert on the car as the car passes the highest point of the hump? (b) **What If?** What is the maximum speed the car can have without losing contact with the road as it passes this highest point?

42. A child's toy consists of a small wedge that has an acute angle θ (Fig. P6.42). The sloping side of the wedge is frictionless, and an object of mass m on it remains at constant height if the wedge is spun at a certain constant speed. The wedge is spun by rotating, as an axis, a vertical rod that is firmly attached to the wedge at the bottom end.

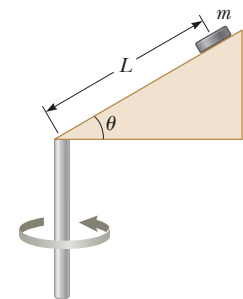


Figure P6.42

Show that, when the object sits at rest at a point at distance L up along the wedge, the speed of the object must be $v = (gL \sin \theta)^{1/2}$.

43. A seaplane of total mass m lands on a lake with initial speed $v_i \hat{i}$. The only horizontal force on it is a resistive force on its pontoons from the water. The resistive force is proportional to the velocity of the seaplane: $\mathbf{R} = -bv\hat{i}$. Newton's second law applied to the plane is $-bv\hat{i} = m(dv/dt)\hat{i}$. From the fundamental theorem

of calculus, this differential equation implies that the speed changes according to

$$\int_{v_i}^v \frac{dv}{v} = -\frac{b}{m} \int_0^t dt$$

(a) Carry out the integration to determine the speed of the seaplane as a function of time. (b) Sketch a graph of the speed as a function of time. (c) Does the seaplane come to a complete stop after a finite interval of time? (d) Does the seaplane travel a finite distance in stopping?

44. An object of mass $m_1 =$

W 4.00 kg is tied to an object of mass $m_2 = 3.00$ kg with String 1 of length $\ell = 0.500$ m. The combination is swung in a vertical circular path on a second string, String 2, of length $\ell = 0.500$ m. During the motion, the two strings are collinear at all times as shown in Figure P6.44. At the top of its motion, m_2 is traveling at $v = 4.00$ m/s. (a) What is the tension in String 1 at this instant? (b) What is the tension in String 2 at this instant? (c) Which string will break first if the combination is rotated faster and faster?

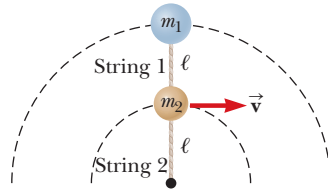


Figure P6.44

45. A ball of mass $m = 0.275$ kg swings in a vertical circular path on a string $L = 0.850$ m long as in Figure P6.45. (a) What are the forces acting on the ball at any point on the path? (b) Draw force diagrams for the ball when it is at the bottom of the circle and when it is at the top. (c) If its speed is 5.20 m/s at the top of the circle, what is the tension in the string there? (d) If the string breaks when its tension exceeds 22.5 N, what is the maximum speed the ball can have at the bottom before that happens?

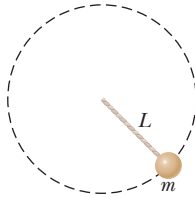


Figure P6.45

46. Why is the following situation impossible? A mischievous child goes to an amusement park with his family. On one ride, after a severe scolding from his mother, he slips out of his seat and climbs to the top of the ride's structure, which is shaped like a cone with its axis vertical and its sloped sides making an angle of $\theta = 20.0^\circ$ with the horizontal as shown in Figure P6.46. This part




Figure P6.46

of the structure rotates about the vertical central axis when the ride operates. The child sits on the sloped surface at a point $d = 5.32$ m down the sloped side from the center of the cone and pouts. The coefficient of static friction between the boy and the cone is 0.700. The ride operator does not notice that the child has slipped away from his seat and so continues to operate the ride. As a result, the sitting, pouting boy rotates in a circular path at a speed of 3.75 m/s.

47. (a) A luggage carousel at an airport has the form of a section of a large cone, steadily rotating about its vertical axis. Its metallic surface slopes downward toward the outside, making an angle of 20.0° with the horizontal. A piece of luggage having mass 30.0 kg is placed on the carousel at a position 7.46 m measured horizontally from the axis of rotation. The travel bag goes around once in 38.0 s. Calculate the force of static friction exerted by the carousel on the bag. (b) The drive motor is shifted to turn the carousel at a higher constant rate of rotation, and the piece of luggage is bumped to another position, 7.94 m from the axis of rotation. Now going around once in every 34.0 s, the bag is on the verge of slipping down the sloped surface. Calculate the coefficient of static friction between the bag and the carousel.

48. In a home laundry dryer, a cylindrical tub containing wet clothes is rotated steadily about a horizontal axis as shown in Figure P6.48. So that the clothes will dry uniformly, they are made to tumble. The rate of rotation of the smooth-walled tub is chosen so that a small piece of cloth will lose contact with the tub when the cloth is at an angle of $\theta = 68.0^\circ$ above the horizontal. If the radius of the tub is $r = 0.330$ m, what rate of revolution is needed?

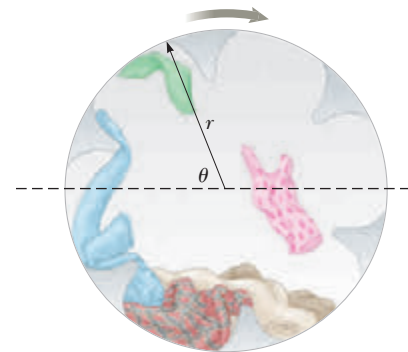


Figure P6.48

49. Interpret the graph in Figure 6.16(b), which describes the results for falling coffee filters discussed in Example 6.10. Proceed as follows. (a) Find the slope of the straight line, including its units. (b) From Equation 6.6, $R = \frac{1}{2}D\rho Av^2$, identify the theoretical slope of a graph of resistive force versus squared speed. (c) Set the experimental and theoretical slopes equal to each other and proceed to calculate the drag coefficient of the filters. Model the cross-sectional area of the filters as that of a circle of radius 10.5 cm and take the density of air to be 1.20 kg/m³. (d) Arbitrarily choose the eighth data point on the graph and find its vertical

separation from the line of best fit. Express this scatter as a percentage. (e) In a short paragraph, state what the graph demonstrates and compare it with the theoretical prediction. You will need to make reference to the quantities plotted on the axes, to the shape of the graph line, to the data points, and to the results of parts (c) and (d).

50. A basin surrounding a drain has the shape of a circular cone opening upward, having everywhere an angle of 35.0° with the horizontal. A 25.0-g ice cube is set sliding around the cone without friction in a horizontal circle of radius R . (a) Find the speed the ice cube must have as a function of R . (b) Is any piece of data unnecessary for the solution? Suppose R is made two times larger. (c) Will the required speed increase, decrease, or stay constant? If it changes, by what factor? (d) Will the time required for each revolution increase, decrease, or stay constant? If it changes, by what factor? (e) Do the answers to parts (c) and (d) seem contradictory? Explain.

51. A truck is moving with constant acceleration a up a hill that makes an angle ϕ with the horizontal as in Figure P6.51. A small sphere of mass m is suspended from the ceiling of the truck by a light cord. If the pendulum makes a constant angle θ with the perpendicular to the ceiling, what is a ?

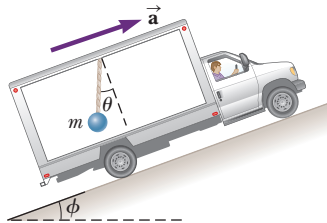


Figure P6.51

52. The pilot of an airplane executes a loop-the-loop maneuver in a vertical circle. The speed of the airplane is 300 mi/h at the top of the loop and 450 mi/h at the bottom, and the radius of the circle is 1 200 ft. (a) What is the pilot's apparent weight at the lowest point if his true weight is 160 lb? (b) What is his apparent weight at the highest point? (c) **What If?** Describe how the pilot could experience weightlessness if both the radius and the speed can be varied. *Note:* His apparent weight is equal to the magnitude of the force exerted by the seat on his body.
53. **Review.** While learning to drive, you are in a 1 200-kg car moving at 20.0 m/s across a large, vacant, level parking lot. Suddenly you realize you are heading straight toward the brick sidewall of a large supermarket and are in danger of running into it. The pavement can exert a maximum horizontal force of 7 000 N on the car. (a) Explain why you should expect the force to have a well-defined maximum value. (b) Suppose you apply the brakes and do not turn the steering wheel. Find the minimum distance you must be from the wall to avoid a collision. (c) If you do not brake but instead maintain constant speed and turn the steering wheel, what is the minimum distance you must be from the wall to avoid a collision? (d) Of the two methods in parts (b) and (c), which is better for avoiding a collision? Or should you use both the brakes and the steering wheel, or neither? Explain. (e) Does the conclusion

in part (d) depend on the numerical values given in this problem, or is it true in general? Explain.

54. A puck of mass m_1 is tied to a string and allowed to revolve in a circle of radius R on a frictionless, horizontal table. The other end of the string passes through a small hole in the center of the table, and an object of mass m_2 is tied to it (Fig. P6.54).

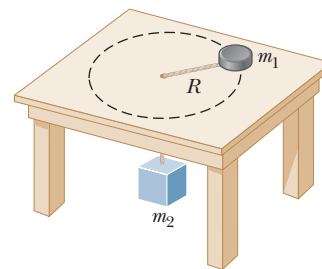


Figure P6.54

The suspended object remains in equilibrium while the puck on the tabletop revolves. Find symbolic expressions for (a) the tension in the string, (b) the radial force acting on the puck, and (c) the speed of the puck. (d) Qualitatively describe what will happen in the motion of the puck if the value of m_2 is increased by placing a small additional load on the puck. (e) Qualitatively describe what will happen in the motion of the puck if the value of m_2 is instead decreased by removing a part of the hanging load.

55. **M** Because the Earth rotates about its axis, a point on the equator experiences a centripetal acceleration of 0.0337 m/s^2 , whereas a point at the poles experiences no centripetal acceleration. If a person at the equator has a mass of 75.0 kg, calculate (a) the gravitational force (true weight) on the person and (b) the normal force (apparent weight) on the person. (c) Which force is greater? Assume the Earth is a uniform sphere and take $g = 9.800 \text{ m/s}^2$.

56. Galileo thought about whether acceleration should be defined as the rate of change of velocity over time or as the rate of change in velocity over distance. He chose the former, so let's use the name "vroomosity" for the rate of change of velocity over distance. For motion of a particle on a straight line with constant acceleration, the equation $v = v_i + at$ gives its velocity v as a function of time. Similarly, for a particle's linear motion with constant vroomosity k , the equation $v = v_i + kx$ gives the velocity as a function of the position x if the particle's speed is v_i at $x = 0$. (a) Find the law describing the total force acting on this object of mass m . (b) Describe an example of such a motion or explain why it is unrealistic. Consider (c) the possibility of k positive and (d) the possibility of k negative.

57. **AMT** **W** Figure P6.57 shows a photo of a swing ride at an amusement park. The structure consists of a horizontal, rotating, circular platform of diameter D from which seats of mass m are suspended at the end of massless chains of length d . When the system rotates at



Figure P6.57

constant speed, the chains swing outward and make an angle θ with the vertical. Consider such a ride with the following parameters: $D = 8.00$ m, $d = 2.50$ m, $m = 10.0$ kg, and $\theta = 28.0^\circ$. (a) What is the speed of each seat? (b) Draw a diagram of forces acting on the combination of a seat and a 40.0-kg child and (c) find the tension in the chain.

- 58. Review.** A piece of putty is initially located at point A on the rim of a grinding wheel rotating at constant angular speed about a horizontal axis. The putty is dislodged from point A when the diameter through A is horizontal. It then rises vertically and returns to A at the instant the wheel completes one revolution. From this information, we wish to find the speed v of the putty when it leaves the wheel and the force holding it to the wheel. (a) What analysis model is appropriate for the motion of the putty as it rises and falls? (b) Use this model to find a symbolic expression for the time interval between when the putty leaves point A and when it arrives back at A , in terms of v and g . (c) What is the appropriate analysis model to describe point A on the wheel? (d) Find the period of the motion of point A in terms of the tangential speed v and the radius R of the wheel. (e) Set the time interval from part (b) equal to the period from part (d) and solve for the speed v of the putty as it leaves the wheel. (f) If the mass of the putty is m , what is the magnitude of the force that held it to the wheel before it was released?

- 59.** An amusement park ride consists of a large vertical cylinder that spins about its axis fast enough that any person inside is held up against the wall when the floor drops away (Fig. P6.59). The coefficient of static friction between person and wall is μ_s , and the radius of the cylinder is R . (a) Show that the maximum period of revolution necessary to keep the person from falling is $T = (4\pi^2 R \mu_s / g)^{1/2}$. (b) If the rate of revolution of the cylinder is made to be somewhat larger, what happens to the magnitude of each one of the forces acting on the person? What happens in the motion of the person? (c) If the rate of revolution of the cylinder is instead made to be somewhat smaller, what happens to the magnitude of each one of the forces acting on the person? How does the motion of the person change?

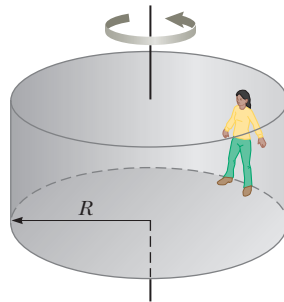


Figure P6.59

- 60.** Members of a skydiving club were given the following data to use in planning their jumps. In the table, d is the distance fallen from rest by a skydiver in a “free-fall stable spread position” versus the time of fall t . (a) Convert the distances in feet into meters. (b) Graph d (in meters) versus t . (c) Determine the value of the terminal speed v_T by finding the slope of the straight portion of the curve. Use a least-squares fit to determine this slope.

t (s)	d (ft)	t (s)	d (ft)	t (s)	d (ft)
0	0	7	652	14	1 831
1	16	8	808	15	2 005
2	62	9	971	16	2 179
3	138	10	1 138	17	2 353
4	242	11	1 309	18	2 527
5	366	12	1 483	19	2 701
6	504	13	1 657	20	2 875

- 61.** A car rounds a banked curve as discussed in Example 6.4 and shown in Figure 6.5. The radius of curvature of the road is R , the banking angle is θ , and the coefficient of static friction is μ_s . (a) Determine the range of speeds the car can have without slipping up or down the road. (b) Find the minimum value for μ_s such that the minimum speed is zero.
- 62.** In Example 6.5, we investigated the forces a child experiences on a Ferris wheel. Assume the data in that example applies to this problem. What force (magnitude and direction) does the seat exert on a 40.0-kg child when the child is halfway between top and bottom?
- 63.** A model airplane of mass 0.750 kg flies with a speed of 35.0 m/s in a horizontal circle at the end of a 60.0-m-long control wire as shown in Figure P6.63a. The forces exerted on the airplane are shown in Figure P6.63b: the tension in the control wire, the gravitational force, and aerodynamic lift that acts at $\theta = 20.0^\circ$ inward from the vertical. Compute the tension in the wire, assuming it makes a constant angle of $\theta = 20.0^\circ$ with the horizontal.

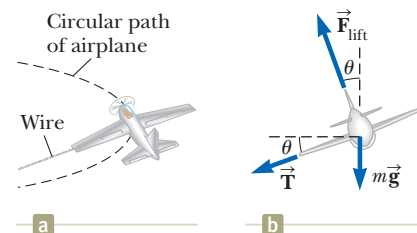


Figure P6.63

- 64.** A student builds and calibrates an accelerometer and uses it to determine the speed of her car around a certain unbanked highway curve. The accelerometer is a plumb bob with a protractor that she attaches to the roof of her car. A friend riding in the car with the student observes that the plumb bob hangs at an angle of 15.0° from the vertical when the car has a speed of 23.0 m/s. (a) What is the centripetal acceleration of the car rounding the curve? (b) What is the radius of the curve? (c) What is the speed of the car if the plumb bob deflection is 9.00° while rounding the same curve?

Challenge Problems

- 65.** A 9.00-kg object starting from rest falls through a viscous medium and experiences a resistive force given by Equation 6.2. The object reaches one half its terminal speed in 5.54 s. (a) Determine the terminal speed. (b) At what time is the speed of the object three-fourths the terminal speed? (c) How far has the object traveled in the first 5.54 s of motion?

66. For $t < 0$, an object of mass m experiences no force and moves in the positive x direction with a constant speed v_i . Beginning at $t = 0$, when the object passes position $x = 0$, it experiences a net resistive force proportional to the square of its speed: $\vec{F}_{\text{net}} = -mkv^2\hat{i}$, where k is a constant. The speed of the object after $t = 0$ is given by $v = v_i/(1 + kv_it)$. (a) Find the position x of the object as a function of time. (b) Find the object's velocity as a function of position.

67. A golfer tees off from a location precisely at $\phi_i = 35.0^\circ$ north latitude. He hits the ball due south, with range 285 m. The ball's initial velocity is at 48.0° above the horizontal. Suppose air resistance is negligible for the golf ball. (a) For how long is the ball in flight? The cup is due south of the golfer's location, and the golfer would have a hole-in-one if the Earth were not rotating. The Earth's rotation makes the tee move in a circle of radius $R_E \cos \phi_i = (6.37 \times 10^6 \text{ m}) \cos 35.0^\circ$ as shown in Figure P6.67. The tee completes one revolution each day. (b) Find the eastward speed of the tee relative to the stars. The hole is also moving east, but it is 285 m farther south and thus at a slightly lower latitude ϕ_f . Because the hole moves in a slightly larger circle, its speed must be greater than that of the tee. (c) By how much does the hole's speed exceed that of the tee? During the time interval the ball is in flight, it moves upward and downward as well as southward with the projectile motion you studied in Chapter 4, but it also moves eastward with the speed you found in part (b). The hole moves to the east at a faster speed, however, pulling ahead of the ball with the relative speed

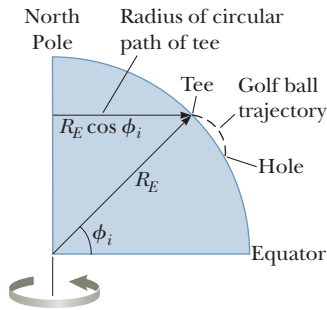


Figure P6.67

you found in part (c). (d) How far to the west of the hole does the ball land?

68. A single bead can slide with negligible friction on a stiff wire that has been bent into a circular loop of radius 15.0 cm as shown in Figure P6.68. The circle is always in a vertical plane and rotates steadily about its vertical diameter with a period of 0.450 s. The position of the bead is described by the angle θ that the radial line, from the center of the loop to the bead, makes with the vertical. (a) At what angle up from the bottom of the circle can the bead stay motionless relative to the turning circle? (b) **What IF?** Repeat the problem, this time taking the period of the circle's rotation as 0.850 s. (c) Describe how the solution to part (b) is different from the solution to part (a). (d) For any period or loop size, is there always an angle at which the bead can stand still relative to the loop? (e) Are there ever more than two angles? Arnold Arons suggested the idea for this problem.
69. The expression $F = arv + br^2v^2$ gives the magnitude of the resistive force (in newtons) exerted on a sphere of radius r (in meters) by a stream of air moving at speed v (in meters per second), where a and b are constants with appropriate SI units. Their numerical values are $a = 3.10 \times 10^{-4}$ and $b = 0.870$. Using this expression, find the terminal speed for water droplets falling under their own weight in air, taking the following values for the drop radii: (a) $10.0 \mu\text{m}$, (b) $100 \mu\text{m}$, (c) 1.00 mm . For parts (a) and (c), you can obtain accurate answers without solving a quadratic equation by considering which of the two contributions to the air resistance is dominant and ignoring the lesser contribution.
70. Because of the Earth's rotation, a plumb bob does not hang exactly along a line directed to the center of the Earth. How much does the plumb bob deviate from a radial line at 35.0° north latitude? Assume the Earth is spherical.

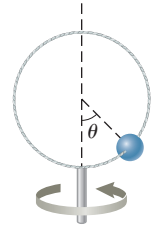


Figure P6.68

Energy of a System

CHAPTER

7



- 7.1 Systems and Environments
- 7.2 Work Done by a Constant Force
- 7.3 The Scalar Product of Two Vectors
- 7.4 Work Done by a Varying Force
- 7.5 Kinetic Energy and the Work–Kinetic Energy Theorem
- 7.6 Potential Energy of a System
- 7.7 Conservative and Nonconservative Forces
- 7.8 Relationship Between Conservative Forces and Potential Energy
- 7.9 Energy Diagrams and Equilibrium of a System

The definitions of quantities such as position, velocity, acceleration, and force and associated principles such as Newton's second law have allowed us to solve a variety of problems. Some problems that could theoretically be solved with Newton's laws, however, are very difficult in practice, but they can be made much simpler with a different approach. Here and in the following chapters, we will investigate this new approach, which will include definitions of quantities that may not be familiar to you. Other quantities may sound familiar, but they may have more specific meanings in physics than in everyday life. We begin this discussion by exploring the notion of *energy*.

The concept of energy is one of the most important topics in science and engineering. In everyday life, we think of energy in terms of fuel for transportation and heating, electricity for lights and appliances, and foods for consumption. These ideas, however, do not truly define energy. They merely tell us that fuels are needed to do a job and that those fuels provide us with something we call energy.

Energy is present in the Universe in various forms. *Every* physical process that occurs in the Universe involves energy and energy transfers or transformations. Unfortunately, despite its extreme importance, energy cannot be easily defined. The variables in previous chapters were relatively concrete; we have everyday experience with velocities and forces, for example. Although we have *experiences* with energy, such as running out of gasoline or losing our electrical service following a violent storm, the *notion* of energy is more abstract.

On a wind farm at the mouth of the River Mersey in Liverpool, England, the moving air does work on the blades of the windmills, causing the blades and the rotor of an electrical generator to rotate. Energy is transferred out of the system of the windmill by means of electricity.
(Christopher Furlong/Getty Images)

The concept of energy can be applied to mechanical systems without resorting to Newton's laws. Furthermore, the energy approach allows us to understand thermal and electrical phenomena in later chapters of the book in terms of the same models that we will develop here in our study of mechanics.

Our analysis models presented in earlier chapters were based on the motion of a *particle* or an object that could be modeled as a particle. We begin our new approach by focusing our attention on a new simplification model, a *system*, and analysis models based on the model of a system. These analysis models will be formally introduced in Chapter 8. In this chapter, we introduce systems and three ways to store energy in a system.

7.1 Systems and Environments

Pitfall Prevention 7.1

Identify the System The most important *first* step to take in solving a problem using the energy approach is to identify the appropriate system of interest.

In the system model, we focus our attention on a small portion of the Universe—the **system**—and ignore details of the rest of the Universe outside of the system. A critical skill in applying the system model to problems is *identifying the system*.

A valid system

- may be a single object or particle
- may be a collection of objects or particles
- may be a region of space (such as the interior of an automobile engine combustion cylinder)
- may vary with time in size and shape (such as a rubber ball, which deforms upon striking a wall)

Identifying the need for a system approach to solving a problem (as opposed to a particle approach) is part of the Categorize step in the General Problem-Solving Strategy outlined in Chapter 2. Identifying the particular system is a second part of this step.

No matter what the particular system is in a given problem, we identify a **system boundary**, an imaginary surface (not necessarily coinciding with a physical surface) that divides the Universe into the system and the **environment** surrounding the system.

As an example, imagine a force applied to an object in empty space. We can define the object as the system and its surface as the system boundary. The force applied to it is an influence on the system from the environment that acts across the system boundary. We will see how to analyze this situation from a system approach in a subsequent section of this chapter.

Another example was seen in Example 5.10, where the system can be defined as the combination of the ball, the block, and the cord. The influence from the environment includes the gravitational forces on the ball and the block, the normal and friction forces on the block, and the force exerted by the pulley on the cord. The forces exerted by the cord on the ball and the block are internal to the system and therefore are not included as an influence from the environment.

There are a number of mechanisms by which a system can be influenced by its environment. The first one we shall investigate is *work*.

7.2 Work Done by a Constant Force

Almost all the terms we have used thus far—velocity, acceleration, force, and so on—convey a similar meaning in physics as they do in everyday life. Now, however, we encounter a term whose meaning in physics is distinctly different from its everyday meaning: work.

To understand what work as an influence on a system means to the physicist, consider the situation illustrated in Figure 7.1. A force \vec{F} is applied to a chalkboard




Figure 7.1 An eraser being pushed along a chalkboard tray by a force acting at different angles with respect to the horizontal direction.

eraser, which we identify as the system, and the eraser slides along the tray. If we want to know how effective the force is in moving the eraser, we must consider not only the magnitude of the force but also its direction. Notice that the finger in Figure 7.1 applies forces in three different directions on the eraser. Assuming the magnitude of the applied force is the same in all three photographs, the push applied in Figure 7.1b does more to move the eraser than the push in Figure 7.1a. On the other hand, Figure 7.1c shows a situation in which the applied force does not move the eraser at all, regardless of how hard it is pushed (unless, of course, we apply a force so great that we break the chalkboard tray!). These results suggest that when analyzing forces to determine the influence they have on the system, we must consider the vector nature of forces. We must also consider the magnitude of the force. Moving a force with a magnitude of $|\vec{F}| = 2 \text{ N}$ through a displacement represents a greater influence on the system than moving a force of magnitude 1 N through the same displacement. The magnitude of the displacement is also important. Moving the eraser 3 m along the tray represents a greater influence than moving it 2 cm if the same force is used in both cases.

Let us examine the situation in Figure 7.2, where the object (the system) undergoes a displacement along a straight line while acted on by a constant force of magnitude F that makes an angle θ with the direction of the displacement.

The **work** W done on a system by an agent exerting a constant force on the system is the product of the magnitude F of the force, the magnitude Δr of the displacement of the point of application of the force, and $\cos \theta$, where θ is the angle between the force and displacement vectors:

$$W \equiv F \Delta r \cos \theta \quad (7.1)$$

Notice in Equation 7.1 that work is a scalar, even though it is defined in terms of two vectors, a force \vec{F} and a displacement $\Delta \vec{r}$. In Section 7.3, we explore how to combine two vectors to generate a scalar quantity.

Notice also that the displacement in Equation 7.1 is that of *the point of application of the force*. If the force is applied to a particle or a rigid object that can be modeled as a particle, this displacement is the same as that of the particle. For a deformable system, however, these displacements are not the same. For example, imagine pressing in on the sides of a balloon with both hands. The center of the balloon moves through zero displacement. The points of application of the forces from your hands on the sides of the balloon, however, do indeed move through a displacement as the balloon is compressed, and that is the displacement to be used in Equation 7.1. We will see other examples of deformable systems, such as springs and samples of gas contained in a vessel.

As an example of the distinction between the definition of work and our everyday understanding of the word, consider holding a heavy chair at arm's length for 3 min . At the end of this time interval, your tired arms may lead you to think you

Pitfall Prevention 7.2

Work Is Done by . . . on . . . Not only must you identify the system, you must also identify what agent in the environment is doing work on the system. When discussing work, always use the phrase, “the work done by . . . on” After “by,” insert the part of the environment that is interacting directly with the system. After “on,” insert the system. For example, “the work done by the hammer on the nail” identifies the nail as the system, and the force from the hammer represents the influence from the environment.

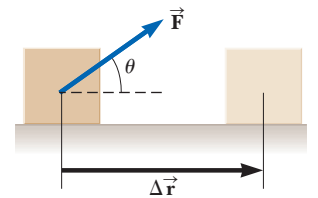


Figure 7.2 An object undergoes a displacement $\Delta \vec{r}$ under the action of a constant force \vec{F} .

Work done by a constant force

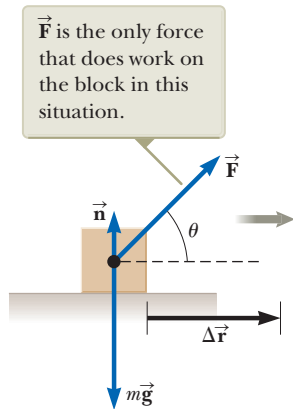


Figure 7.3 An object is displaced on a frictionless, horizontal surface. The normal force \vec{n} and the gravitational force $m\vec{g}$ do no work on the object.

Pitfall Prevention 7.3

Cause of the Displacement We can calculate the work done by a force on an object, but that force is *not* necessarily the cause of the object's displacement. For example, if you lift an object, (negative) work is done on the object by the gravitational force, although gravity is not the cause of the object moving upward!

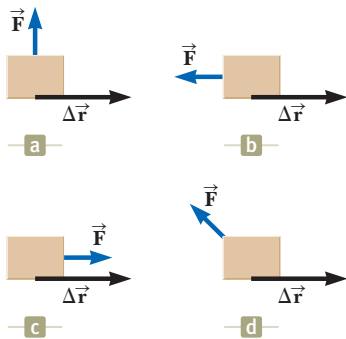


Figure 7.4 (Quick Quiz 7.2) A block is pulled by a force in four different directions. In each case, the displacement of the block is to the right and of the same magnitude.

have done a considerable amount of work on the chair. According to our definition, however, you have done no work on it whatsoever. You exert a force to support the chair, but you do not move it. A force does no work on an object if the force does not move through a displacement. If $\Delta r = 0$, Equation 7.1 gives $W = 0$, which is the situation depicted in Figure 7.1c.

Also notice from Equation 7.1 that the work done by a force on a moving object is zero when the force applied is perpendicular to the displacement of its point of application. That is, if $\theta = 90^\circ$, then $W = 0$ because $\cos 90^\circ = 0$. For example, in Figure 7.3, the work done by the normal force on the object and the work done by the gravitational force on the object are both zero because both forces are perpendicular to the displacement and have zero components along an axis in the direction of $\Delta\vec{r}$.

The sign of the work also depends on the direction of \vec{F} relative to $\Delta\vec{r}$. The work done by the applied force on a system is positive when the projection of \vec{F} onto $\Delta\vec{r}$ is in the same direction as the displacement. For example, when an object is lifted, the work done by the applied force on the object is positive because the direction of that force is upward, in the same direction as the displacement of its point of application. When the projection of \vec{F} onto $\Delta\vec{r}$ is in the direction opposite the displacement, W is negative. For example, as an object is lifted, the work done by the gravitational force on the object is negative. The factor $\cos \theta$ in the definition of W (Eq. 7.1) automatically takes care of the sign.

If an applied force \vec{F} is in the same direction as the displacement $\Delta\vec{r}$, then $\theta = 0$ and $\cos 0 = 1$. In this case, Equation 7.1 gives

$$W = F\Delta r$$

The units of work are those of force multiplied by those of length. Therefore, the SI unit of work is the **newton · meter** ($\text{N} \cdot \text{m} = \text{kg} \cdot \text{m}^2/\text{s}^2$). This combination of units is used so frequently that it has been given a name of its own, the **joule** (J).

An important consideration for a system approach to problems is that **work is an energy transfer**. If W is the work done on a system and W is positive, energy is transferred *to* the system; if W is negative, energy is transferred *from* the system. Therefore, if a system interacts with its environment, this interaction can be described as a transfer of energy across the system boundary. The result is a change in the energy stored in the system. We will learn about the first type of energy storage in Section 7.5, after we investigate more aspects of work.

Quick Quiz 7.1 The gravitational force exerted by the Sun on the Earth holds the Earth in an orbit around the Sun. Let us assume that the orbit is perfectly circular. The work done by this gravitational force during a short time interval in which the Earth moves through a displacement in its orbital path is (a) zero (b) positive (c) negative (d) impossible to determine

Quick Quiz 7.2 Figure 7.4 shows four situations in which a force is applied to an object. In all four cases, the force has the same magnitude, and the displacement of the object is to the right and of the same magnitude. Rank the situations in order of the work done by the force on the object, from most positive to most negative.

Example 7.1

Mr. Clean

A man cleaning a floor pulls a vacuum cleaner with a force of magnitude $F = 50.0 \text{ N}$ at an angle of 30.0° with the horizontal (Fig. 7.5). Calculate the work done by the force on the vacuum cleaner as the vacuum cleaner is displaced 3.00 m to the right.

7.1 continued

SOLUTION

Conceptualize Figure 7.5 helps conceptualize the situation. Think about an experience in your life in which you pulled an object across the floor with a rope or cord.

Categorize We are asked for the work done on an object by a force and are given the force on the object, the displacement of the object, and the angle between the two vectors, so we categorize this example as a substitution problem. We identify the vacuum cleaner as the system.

Use the definition of work (Eq. 7.1):

$$W = F \Delta r \cos \theta = (50.0 \text{ N})(3.00 \text{ m})(\cos 30.0^\circ) = 130 \text{ J}$$

Notice in this situation that the normal force \vec{n} and the gravitational $\vec{F}_g = m\vec{g}$ do no work on the vacuum cleaner because these forces are perpendicular to the displacements of their points of application. Furthermore, there was no mention of whether there was friction between the vacuum cleaner and the floor. The presence or absence of friction is not important when calculating the work done by the applied force. In addition, this work does not depend on whether the vacuum moved at constant velocity or if it accelerated.

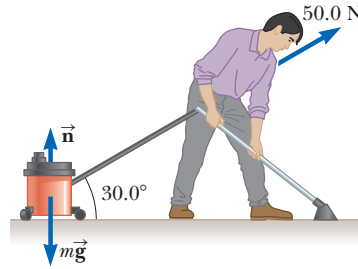


Figure 7.5 (Example 7.1) A vacuum cleaner being pulled at an angle of 30.0° from the horizontal.

7.3 The Scalar Product of Two Vectors

Because of the way the force and displacement vectors are combined in Equation 7.1, it is helpful to use a convenient mathematical tool called the **scalar product** of two vectors. We write this scalar product of vectors \vec{A} and \vec{B} as $\vec{A} \cdot \vec{B}$. (Because of the dot symbol, the scalar product is often called the **dot product**.)

The scalar product of any two vectors \vec{A} and \vec{B} is defined as a scalar quantity equal to the product of the magnitudes of the two vectors and the cosine of the angle θ between them:

$$\vec{A} \cdot \vec{B} \equiv AB \cos \theta \quad (7.2)$$

As is the case with any multiplication, \vec{A} and \vec{B} need not have the same units.

By comparing this definition with Equation 7.1, we can express Equation 7.1 as a scalar product:

$$W = F \Delta r \cos \theta = \vec{F} \cdot \Delta \vec{r} \quad (7.3)$$

In other words, $\vec{F} \cdot \Delta \vec{r}$ is a shorthand notation for $F \Delta r \cos \theta$.

Before continuing with our discussion of work, let us investigate some properties of the dot product. Figure 7.6 shows two vectors \vec{A} and \vec{B} and the angle θ between them used in the definition of the dot product. In Figure 7.6, $B \cos \theta$ is the projection of \vec{B} onto \vec{A} . Therefore, Equation 7.2 means that $\vec{A} \cdot \vec{B}$ is the product of the magnitude of \vec{A} and the projection of \vec{B} onto \vec{A} .¹

From the right-hand side of Equation 7.2, we also see that the scalar product is **commutative**.² That is,

$$\vec{A} \cdot \vec{B} = \vec{B} \cdot \vec{A}$$

¹This statement is equivalent to stating that $\vec{A} \cdot \vec{B}$ equals the product of the magnitude of \vec{B} and the projection of \vec{A} onto \vec{B} .

²In Chapter 11, you will see another way of combining vectors that proves useful in physics and is not commutative.

Pitfall Prevention 7.4

Work Is a Scalar Although Equation 7.3 defines the work in terms of two vectors, *work is a scalar*; there is no direction associated with it. All types of energy and energy transfer are scalars. This fact is a major advantage of the energy approach because we don't need vector calculations!

Scalar product of any two vectors \vec{A} and \vec{B}

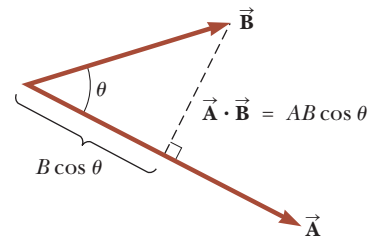


Figure 7.6 The scalar product $\vec{A} \cdot \vec{B}$ equals the magnitude of \vec{A} multiplied by $B \cos \theta$, which is the projection of \vec{B} onto \vec{A} .

Finally, the scalar product obeys the **distributive law of multiplication**, so

$$\vec{A} \cdot (\vec{B} + \vec{C}) = \vec{A} \cdot \vec{B} + \vec{A} \cdot \vec{C}$$

The scalar product is simple to evaluate from Equation 7.2 when \vec{A} is either perpendicular or parallel to \vec{B} . If \vec{A} is perpendicular to \vec{B} ($\theta = 90^\circ$), then $\vec{A} \cdot \vec{B} = 0$. (The equality $\vec{A} \cdot \vec{B} = 0$ also holds in the more trivial case in which either \vec{A} or \vec{B} is zero.) If vector \vec{A} is parallel to vector \vec{B} and the two point in the same direction ($\theta = 0$), then $\vec{A} \cdot \vec{B} = AB$. If vector \vec{A} is parallel to vector \vec{B} but the two point in opposite directions ($\theta = 180^\circ$), then $\vec{A} \cdot \vec{B} = -AB$. The scalar product is negative when $90^\circ < \theta \leq 180^\circ$.

The unit vectors \hat{i} , \hat{j} , and \hat{k} , which were defined in Chapter 3, lie in the positive x , y , and z directions, respectively, of a right-handed coordinate system. Therefore, it follows from the definition of $\vec{A} \cdot \vec{B}$ that the scalar products of these unit vectors are

$$\hat{i} \cdot \hat{i} = \hat{j} \cdot \hat{j} = \hat{k} \cdot \hat{k} = 1 \quad (7.4)$$

$$\hat{i} \cdot \hat{j} = \hat{i} \cdot \hat{k} = \hat{j} \cdot \hat{k} = 0 \quad (7.5)$$

Scalar products of
unit vectors

Equations 3.18 and 3.19 state that two vectors \vec{A} and \vec{B} can be expressed in unit-vector form as

$$\vec{A} = A_x \hat{i} + A_y \hat{j} + A_z \hat{k}$$

$$\vec{B} = B_x \hat{i} + B_y \hat{j} + B_z \hat{k}$$

Using these expressions for the vectors and the information given in Equations 7.4 and 7.5 shows that the scalar product of \vec{A} and \vec{B} reduces to

$$\vec{A} \cdot \vec{B} = A_x B_x + A_y B_y + A_z B_z \quad (7.6)$$

(Details of the derivation are left for you in Problem 7 at the end of the chapter.) In the special case in which $\vec{A} = \vec{B}$, we see that

$$\vec{A} \cdot \vec{A} = A_x^2 + A_y^2 + A_z^2 = A^2$$

- Quick Quiz 7.3** Which of the following statements is true about the relationship between the dot product of two vectors and the product of the magnitudes of the vectors? (a) $\vec{A} \cdot \vec{B}$ is larger than AB . (b) $\vec{A} \cdot \vec{B}$ is smaller than AB . (c) $\vec{A} \cdot \vec{B}$ could be larger or smaller than AB , depending on the angle between the vectors. (d) $\vec{A} \cdot \vec{B}$ could be equal to AB .

Example 7.2 The Scalar Product

The vectors \vec{A} and \vec{B} are given by $\vec{A} = 2\hat{i} + 3\hat{j}$ and $\vec{B} = -\hat{i} + 2\hat{j}$.

(A) Determine the scalar product $\vec{A} \cdot \vec{B}$.

SOLUTION

Conceptualize There is no physical system to imagine here. Rather, it is purely a mathematical exercise involving two vectors.

Categorize Because we have a definition for the scalar product, we categorize this example as a substitution problem.

Substitute the specific vector expressions for \vec{A} and \vec{B} :

$$\begin{aligned} \vec{A} \cdot \vec{B} &= (2\hat{i} + 3\hat{j}) \cdot (-\hat{i} + 2\hat{j}) \\ &= -2\hat{i} \cdot \hat{i} + 2\hat{i} \cdot 2\hat{j} - 3\hat{j} \cdot \hat{i} + 3\hat{j} \cdot 2\hat{j} \\ &= -2(1) + 4(0) - 3(0) + 6(1) = -2 + 6 = 4 \end{aligned}$$

The same result is obtained when we use Equation 7.6 directly, where $A_x = 2$, $A_y = 3$, $B_x = -1$, and $B_y = 2$.

7.2 continued

(B) Find the angle θ between $\vec{\mathbf{A}}$ and $\vec{\mathbf{B}}$.

SOLUTION

Evaluate the magnitudes of $\vec{\mathbf{A}}$ and $\vec{\mathbf{B}}$ using the Pythagorean theorem:

$$A = \sqrt{A_x^2 + A_y^2} = \sqrt{(2)^2 + (3)^2} = \sqrt{13}$$

$$B = \sqrt{B_x^2 + B_y^2} = \sqrt{(-1)^2 + (2)^2} = \sqrt{5}$$

Use Equation 7.2 and the result from part (A) to find the angle:

$$\cos \theta = \frac{\vec{\mathbf{A}} \cdot \vec{\mathbf{B}}}{AB} = \frac{4}{\sqrt{13}\sqrt{5}} = \frac{4}{\sqrt{65}}$$

$$\theta = \cos^{-1} \frac{4}{\sqrt{65}} = 60.3^\circ$$

Example 7.3 Work Done by a Constant Force

A particle moving in the xy plane undergoes a displacement given by $\Delta\vec{\mathbf{r}} = (2.0\hat{\mathbf{i}} + 3.0\hat{\mathbf{j}})$ m as a constant force $\vec{\mathbf{F}} = (5.0\hat{\mathbf{i}} + 2.0\hat{\mathbf{j}})$ N acts on the particle. Calculate the work done by $\vec{\mathbf{F}}$ on the particle.

SOLUTION

Conceptualize Although this example is a little more physical than the previous one in that it identifies a force and a displacement, it is similar in terms of its mathematical structure.

Categorize Because we are given force and displacement vectors and asked to find the work done by this force on the particle, we categorize this example as a substitution problem.

Substitute the expressions for $\vec{\mathbf{F}}$ and $\Delta\vec{\mathbf{r}}$ into Equation 7.3 and use Equations 7.4 and 7.5:

$$\begin{aligned} W &= \vec{\mathbf{F}} \cdot \Delta\vec{\mathbf{r}} = [(5.0\hat{\mathbf{i}} + 2.0\hat{\mathbf{j}}) \text{ N}] \cdot [(2.0\hat{\mathbf{i}} + 3.0\hat{\mathbf{j}}) \text{ m}] \\ &= (5.0\hat{\mathbf{i}} \cdot 2.0\hat{\mathbf{i}} + 5.0\hat{\mathbf{i}} \cdot 3.0\hat{\mathbf{j}} + 2.0\hat{\mathbf{j}} \cdot 2.0\hat{\mathbf{i}} + 2.0\hat{\mathbf{j}} \cdot 3.0\hat{\mathbf{j}}) \text{ N} \cdot \text{m} \\ &= [10 + 0 + 0 + 6] \text{ N} \cdot \text{m} = 16 \text{ J} \end{aligned}$$

7.4 Work Done by a Varying Force

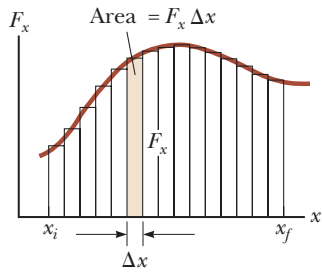
Consider a particle being displaced along the x axis under the action of a force that varies with position. In such a situation, we cannot use Equation 7.1 to calculate the work done by the force because this relationship applies only when $\vec{\mathbf{F}}$ is constant in magnitude and direction. Figure 7.7a (page 184) shows a varying force applied on a particle that moves from initial position x_i to final position x_f . Imagine a particle undergoing a very small displacement Δx , shown in the figure. The x component F_x of the force is approximately constant over this small interval; for this small displacement, we can approximate the work done on the particle by the force using Equation 7.1 as

$$W \approx F_x \Delta x$$

which is the area of the shaded rectangle in Figure 7.7a. If the F_x versus x curve is divided into a large number of such intervals, the total work done for the displacement from x_i to x_f is approximately equal to the sum of a large number of such terms:

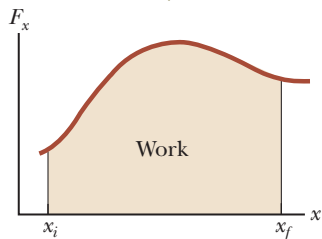
$$W \approx \sum_{x_i}^{x_f} F_x \Delta x$$

The total work done for the displacement from x_i to x_f is approximately equal to the sum of the areas of all the rectangles.



a

The work done by the component F_x of the varying force as the particle moves from x_i to x_f is exactly equal to the area under the curve.



b

Figure 7.7 (a) The work done on a particle by the force component F_x for the small displacement Δx is $F_x \Delta x$, which equals the area of the shaded rectangle. (b) The width Δx of each rectangle is shrunk to zero.

If the size of the small displacements is allowed to approach zero, the number of terms in the sum increases without limit but the value of the sum approaches a definite value equal to the area bounded by the F_x curve and the x axis:

$$\lim_{\Delta x \rightarrow 0} \sum_{x_i}^{x_f} F_x \Delta x = \int_{x_i}^{x_f} F_x dx$$

Therefore, we can express the work done by F_x on the system of the particle as it moves from x_i to x_f as

$$W = \int_{x_i}^{x_f} F_x dx \quad (7.7)$$

This equation reduces to Equation 7.1 when the component $F_x = F \cos \theta$ remains constant.

If more than one force acts on a system *and the system can be modeled as a particle*, the total work done on the system is just the work done by the net force. If we express the net force in the x direction as ΣF_x , the total work, or *net work*, done as the particle moves from x_i to x_f is

$$\Sigma W = W_{\text{ext}} = \int_{x_i}^{x_f} (\Sigma F_x) dx \quad (\text{particle})$$

For the general case of a net force $\Sigma \vec{F}$ whose magnitude and direction may both vary, we use the scalar product,

$$\Sigma W = W_{\text{ext}} = \int (\Sigma \vec{F}) \cdot d\vec{r} \quad (\text{particle}) \quad (7.8)$$

where the integral is calculated over the path that the particle takes through space. The subscript “ext” on work reminds us that the net work is done by an *external* agent on the system. We will use this notation in this chapter as a reminder and to differentiate this work from an *internal* work to be described shortly.

If the system cannot be modeled as a particle (for example, if the system is deformable), we cannot use Equation 7.8 because different forces on the system may move through different displacements. In this case, we must evaluate the work done by each force separately and then add the works algebraically to find the net work done on the system:

$$\Sigma W = W_{\text{ext}} = \sum_{\text{forces}} \left(\int \vec{F} \cdot d\vec{r} \right) \quad (\text{deformable system})$$

Example 7.4 Calculating Total Work Done from a Graph

A force acting on a particle varies with x as shown in Figure 7.8. Calculate the work done by the force on the particle as it moves from $x = 0$ to $x = 6.0$ m.

SOLUTION

Conceptualize Imagine a particle subject to the force in Figure 7.8. The force remains constant as the particle moves through the first 4.0 m and then decreases linearly to zero at 6.0 m. In terms of earlier discussions of motion, the particle could be modeled as a particle under constant acceleration for the first 4.0 m because the force is constant. Between 4.0 m and 6.0 m, however, the motion does not fit into one of our earlier analysis models because the acceleration of the particle is changing. If the particle starts from rest, its speed increases throughout the motion, and the particle is always moving in the positive x direction. These details about its speed and direction are not necessary for the calculation of the work done, however.

Categorize Because the force varies during the motion of the particle, we must use the techniques for work done by varying forces. In this case, the graphical representation in Figure 7.8 can be used to evaluate the work done.

The net work done by this force is the area under the curve.

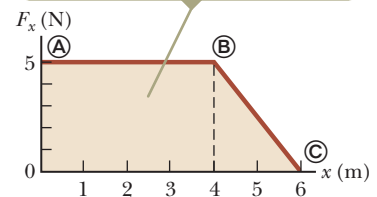


Figure 7.8 (Example 7.4) The force acting on a particle is constant for the first 4.0 m of motion and then decreases linearly with x from $x_{\text{A}} = 4.0$ m to $x_{\text{C}} = 6.0$ m.

7.4 continued

Analyze The work done by the force is equal to the area under the curve from $x_{\text{A}} = 0$ to $x_{\text{C}} = 6.0$ m. This area is equal to the area of the rectangular section from **A** to **B** plus the area of the triangular section from **B** to **C**.

Evaluate the area of the rectangle:

$$W_{\text{A to B}} = (5.0 \text{ N})(4.0 \text{ m}) = 20 \text{ J}$$

Evaluate the area of the triangle:

$$W_{\text{B to C}} = \frac{1}{2}(5.0 \text{ N})(2.0 \text{ m}) = 5.0 \text{ J}$$

Find the total work done by the force on the particle:

$$W_{\text{A to C}} = W_{\text{A to B}} + W_{\text{B to C}} = 20 \text{ J} + 5.0 \text{ J} = 25 \text{ J}$$

Finalize Because the graph of the force consists of straight lines, we can use rules for finding the areas of simple geometric models to evaluate the total work done in this example. If a force does not vary linearly as in Figure 7.7, such rules cannot be used and the force function must be integrated as in Equation 7.7 or 7.8.

Work Done by a Spring

A model of a common physical system on which the force varies with position is shown in Figure 7.9. The system is a block on a frictionless, horizontal surface and connected to a spring. For many springs, if the spring is either stretched or compressed a small distance from its unstretched (equilibrium) configuration, it exerts on the block a force that can be mathematically modeled as

$$F_s = -kx$$

(7.9) ◀ Spring force

where x is the position of the block relative to its equilibrium ($x = 0$) position and k is a positive constant called the **force constant** or the **spring constant** of the spring. In other words, the force required to stretch or compress a spring is proportional to the amount of stretch or compression x . This force law for springs is known as **Hooke's law**. The value of k is a measure of the *stiffness* of the spring. Stiff springs have large k values, and soft springs have small k values. As can be seen from Equation 7.9, the units of k are N/m.

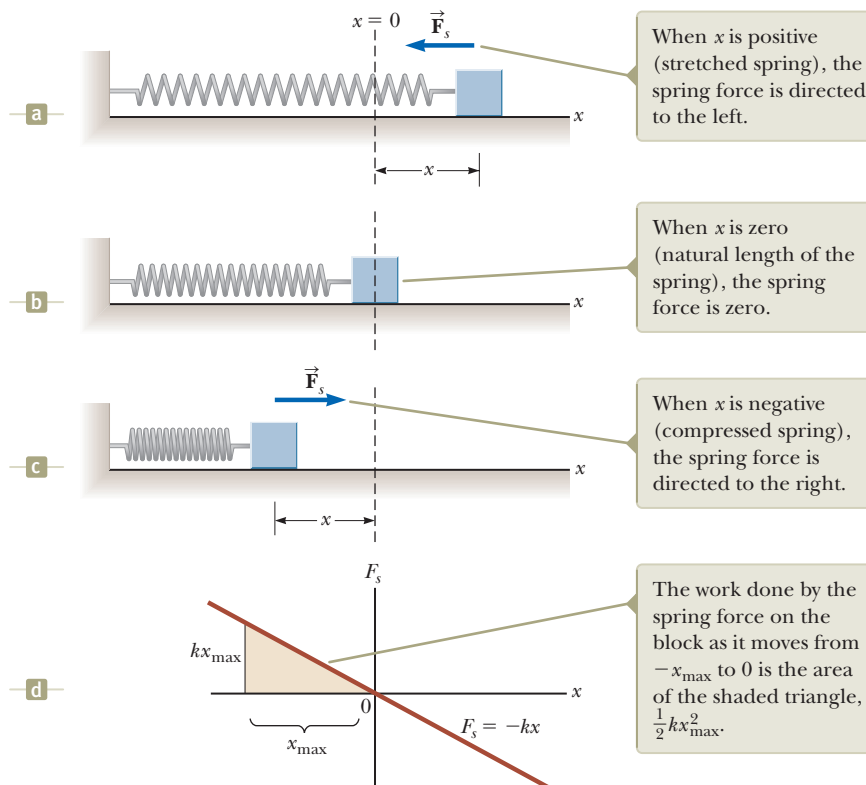


Figure 7.9 The force exerted by a spring on a block varies with the block's position x relative to the equilibrium position $x = 0$. (a) x is positive. (b) x is zero. (c) x is negative. (d) Graph of F_s versus x for the block–spring system.

The vector form of Equation 7.9 is

$$\vec{\mathbf{F}}_s = F_s \hat{\mathbf{i}} = -kx \hat{\mathbf{i}} \quad (7.10)$$

where we have chosen the x axis to lie along the direction the spring extends or compresses.

The negative sign in Equations 7.9 and 7.10 signifies that the force exerted by the spring is always directed *opposite* the displacement from equilibrium. When $x > 0$ as in Figure 7.9a so that the block is to the right of the equilibrium position, the spring force is directed to the left, in the negative x direction. When $x < 0$ as in Figure 7.9c, the block is to the left of equilibrium and the spring force is directed to the right, in the positive x direction. When $x = 0$ as in Figure 7.9b, the spring is unstretched and $F_s = 0$. Because the spring force always acts toward the equilibrium position ($x = 0$), it is sometimes called a *restoring force*.

If the spring is compressed until the block is at the point $-x_{\max}$ and is then released, the block moves from $-x_{\max}$ through zero to $+x_{\max}$. It then reverses direction, returns to $-x_{\max}$, and continues oscillating back and forth. We will study these oscillations in more detail in Chapter 15. For now, let's investigate the work done by the spring on the block over small portions of one oscillation.

Suppose the block has been pushed to the left to a position $-x_{\max}$ and is then released. We identify the block as our system and calculate the work W_s done by the spring force on the block as the block moves from $x_i = -x_{\max}$ to $x_f = 0$. Applying Equation 7.8 and assuming the block may be modeled as a particle, we obtain

$$W_s = \int \vec{\mathbf{F}}_s \cdot d\vec{\mathbf{r}} = \int_{x_i}^{x_f} (-kx \hat{\mathbf{i}}) \cdot (dx \hat{\mathbf{i}}) = \int_{-x_{\max}}^0 (-kx) dx = \frac{1}{2} kx_{\max}^2 \quad (7.11)$$

where we have used the integral $\int x^n dx = x^{n+1}/(n+1)$ with $n = 1$. The work done by the spring force is positive because the force is in the same direction as its displacement (both are to the right). Because the block arrives at $x = 0$ with some speed, it will continue moving until it reaches a position $+x_{\max}$. The work done by the spring force on the block as it moves from $x_i = 0$ to $x_f = x_{\max}$ is $W_s = -\frac{1}{2} kx_{\max}^2$. The work is negative because for this part of the motion the spring force is to the left and its displacement is to the right. Therefore, the *net* work done by the spring force on the block as it moves from $x_i = -x_{\max}$ to $x_f = x_{\max}$ is *zero*.

Figure 7.9d is a plot of F_s versus x . The work calculated in Equation 7.11 is the area of the shaded triangle, corresponding to the displacement from $-x_{\max}$ to 0. Because the triangle has base x_{\max} and height kx_{\max} , its area is $\frac{1}{2} kx_{\max}^2$, agreeing with the work done by the spring as given by Equation 7.11.

If the block undergoes an arbitrary displacement from $x = x_i$ to $x = x_f$, the work done by the spring force on the block is

Work done by a spring ►

$$W_s = \int_{x_i}^{x_f} (-kx) dx = \frac{1}{2} kx_i^2 - \frac{1}{2} kx_f^2 \quad (7.12)$$

From Equation 7.12, we see that the work done by the spring force is zero for any motion that ends where it began ($x_i = x_f$). We shall make use of this important result in Chapter 8 when we describe the motion of this system in greater detail.

Equations 7.11 and 7.12 describe the work done by the spring on the block. Now let us consider the work done on the block by an *external agent* as the agent applies a force on the block and the block moves *very slowly* from $x_i = -x_{\max}$ to $x_f = 0$ as in Figure 7.10. We can calculate this work by noting that at any value of the position, the *applied force* $\vec{\mathbf{F}}_{\text{app}}$ is equal in magnitude and opposite in direction to the spring force $\vec{\mathbf{F}}_s$, so $\vec{\mathbf{F}}_{\text{app}} = F_{\text{app}} \hat{\mathbf{i}} = -\vec{\mathbf{F}}_s = -(-kx \hat{\mathbf{i}}) = kx \hat{\mathbf{i}}$. Therefore, the work done by this applied force (the external agent) on the system of the block is

$$W_{\text{ext}} = \int \vec{\mathbf{F}}_{\text{app}} \cdot d\vec{\mathbf{r}} = \int_{x_i}^{x_f} (kx \hat{\mathbf{i}}) \cdot (dx \hat{\mathbf{i}}) = \int_{-x_{\max}}^0 kx dx = -\frac{1}{2} kx_{\max}^2$$

This work is equal to the negative of the work done by the spring force for this displacement (Eq. 7.11). The work is negative because the external agent must push inward on the spring to prevent it from expanding, and this direction is opposite the direction of the displacement of the point of application of the force as the block moves from $-x_{\text{max}}$ to 0.

For an arbitrary displacement of the block, the work done on the system by the external agent is

$$W_{\text{ext}} = \int_{x_i}^{x_f} kx \, dx = \frac{1}{2}kx_f^2 - \frac{1}{2}kx_i^2 \tag{7.13}$$

Notice that this equation is the negative of Equation 7.12.

- Quick Quiz 7.4** A dart is inserted into a spring-loaded dart gun by pushing the spring in by a distance x . For the next loading, the spring is compressed a distance $2x$. How much work is required to load the second dart compared with that required to load the first? (a) four times as much (b) two times as much (c) the same (d) half as much (e) one-fourth as much

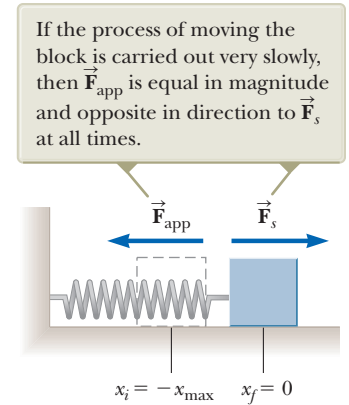


Figure 7.10 A block moves from $x_i = -x_{\text{max}}$ to $x_f = 0$ on a frictionless surface as a force \vec{F}_{app} is applied to the block.

Example 7.5 Measuring k for a Spring **AM**

A common technique used to measure the force constant of a spring is demonstrated by the setup in Figure 7.11. The spring is hung vertically (Fig. 7.11a), and an object of mass m is attached to its lower end. Under the action of the “load” mg , the spring stretches a distance d from its equilibrium position (Fig. 7.11b).

(A) If a spring is stretched 2.0 cm by a suspended object having a mass of 0.55 kg, what is the force constant of the spring?

SOLUTION

Conceptualize Figure 7.11b shows what happens to the spring when the object is attached to it. Simulate this situation by hanging an object on a rubber band.

Categorize The object in Figure 7.11b is at rest and not accelerating, so it is modeled as a *particle in equilibrium*.

Analyze Because the object is in equilibrium, the net force on it is zero and the upward spring force balances the downward gravitational force $m\vec{g}$ (Fig. 7.11c).

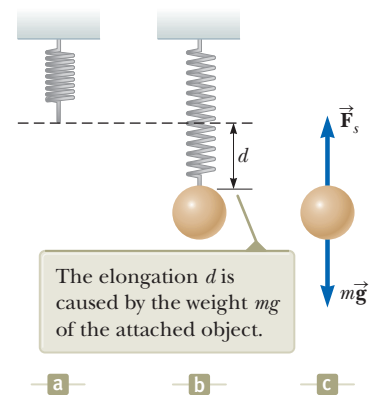


Figure 7.11 (Example 7.5) Determining the force constant k of a spring.

Apply the particle in equilibrium model to the object:

$$\vec{F}_s + m\vec{g} = 0 \rightarrow F_s - mg = 0 \rightarrow F_s = mg$$

Apply Hooke’s law to give $F_s = kd$ and solve for k :

$$k = \frac{mg}{d} = \frac{(0.55 \text{ kg})(9.80 \text{ m/s}^2)}{2.0 \times 10^{-2} \text{ m}} = 2.7 \times 10^2 \text{ N/m}$$

(B) How much work is done by the spring on the object as it stretches through this distance?

SOLUTION

Use Equation 7.12 to find the work done by the spring on the object:

$$W_s = 0 - \frac{1}{2}kd^2 = -\frac{1}{2}(2.7 \times 10^2 \text{ N/m})(2.0 \times 10^{-2} \text{ m})^2 = -5.4 \times 10^{-2} \text{ J}$$

Finalize This work is negative because the spring force acts upward on the object, but its point of application (where the spring attaches to the object) moves downward. As the object moves through the 2.0-cm distance, the gravitational force also does work on it. This work is positive because the gravitational force is downward and so is the displacement

continued

7.5 continued

of the point of application of this force. Would we expect the work done by the gravitational force, as the applied force in a direction opposite to the spring force, to be the negative of the answer above? Let's find out.

Evaluate the work done by the gravitational force on the object:

$$W = \vec{\mathbf{F}} \cdot \Delta \vec{\mathbf{r}} = (mg)(d) \cos 0 = mgd \\ = (0.55 \text{ kg})(9.80 \text{ m/s}^2)(2.0 \times 10^{-2} \text{ m}) = 1.1 \times 10^{-1} \text{ J}$$

If you expected the work done by gravity simply to be that done by the spring with a positive sign, you may be surprised by this result! To understand why that is not the case, we need to explore further, as we do in the next section.

7.5 Kinetic Energy and the Work–Kinetic Energy Theorem

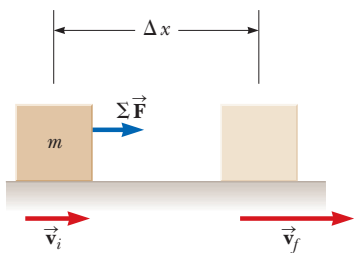


Figure 7.12 An object undergoing a displacement $\Delta \vec{\mathbf{r}} = \Delta x \hat{\mathbf{i}}$ and a change in velocity under the action of a constant net force $\Sigma \vec{\mathbf{F}}$.

We have investigated work and identified it as a mechanism for transferring energy into a system. We have stated that work is an influence on a system from the environment, but we have not yet discussed the *result* of this influence on the system. One possible result of doing work on a system is that the system changes its speed. In this section, we investigate this situation and introduce our first type of energy that a system can possess, called *kinetic energy*.

Consider a system consisting of a single object. Figure 7.12 shows a block of mass m moving through a displacement directed to the right under the action of a net force $\Sigma \vec{\mathbf{F}}$, also directed to the right. We know from Newton's second law that the block moves with an acceleration $\vec{\mathbf{a}}$. If the block (and therefore the force) moves through a displacement $\Delta \vec{\mathbf{r}} = \Delta x \hat{\mathbf{i}} = (x_f - x_i) \hat{\mathbf{i}}$, the net work done on the block by the external net force $\Sigma \vec{\mathbf{F}}$ is

$$W_{\text{ext}} = \int_{x_i}^{x_f} \Sigma F dx \quad (7.14)$$

Using Newton's second law, we substitute for the magnitude of the net force $\Sigma F = ma$ and then perform the following chain-rule manipulations on the integrand:

$$W_{\text{ext}} = \int_{x_i}^{x_f} ma dx = \int_{x_i}^{x_f} m \frac{dv}{dt} dx = \int_{x_i}^{x_f} m \frac{dv}{dx} \frac{dx}{dt} dx = \int_{v_i}^{v_f} mv dv \\ W_{\text{ext}} = \frac{1}{2}mv_f^2 - \frac{1}{2}mv_i^2 \quad (7.15)$$

where v_i is the speed of the block at $x = x_i$ and v_f is its speed at x_f .

Equation 7.15 was generated for the specific situation of one-dimensional motion, but it is a general result. It tells us that the work done by the net force on a particle of mass m is equal to the difference between the initial and final values of a quantity $\frac{1}{2}mv^2$. This quantity is so important that it has been given a special name, **kinetic energy**:

Kinetic energy ►

$$K \equiv \frac{1}{2}mv^2 \quad (7.16)$$

Kinetic energy represents the energy associated with the motion of the particle. Note that kinetic energy is a scalar quantity and has the same units as work. For example, a 2.0-kg object moving with a speed of 4.0 m/s has a kinetic energy of 16 J. Table 7.1 lists the kinetic energies for various objects.

Equation 7.15 states that the work done on a particle by a net force $\Sigma \vec{\mathbf{F}}$ acting on it equals the change in kinetic energy of the particle. It is often convenient to write Equation 7.15 in the form

$$W_{\text{ext}} = K_f - K_i = \Delta K \quad (7.17)$$

Another way to write it is $K_f = K_i + W_{\text{ext}}$, which tells us that the final kinetic energy of an object is equal to its initial kinetic energy plus the change in energy due to the net work done on it.

Table 7.1 Kinetic Energies for Various Objects

Object	Mass (kg)	Speed (m/s)	Kinetic Energy (J)
Earth orbiting the Sun	5.97	2.98	2.65
Moon orbiting the Earth	7.35	1.02	3.82 ²⁸
Rocket moving at escape speed	500	1.12	3.14
Automobile at 65 mi/h	1000	29	8.4
Running athlete	70	10	3 500
Stone dropped from 10 m	1.0	14	98
Golf ball at terminal speed	0.046	44	45
Raindrop at terminal speed	3.5	9.0	1.4
Oxygen molecule in air	5.3	500	6.6 ²¹

Escape speed is the minimum speed an object must reach near the Earth's surface to move infinitely far away from the Earth.

We have generated Equation 7.17 by imagining doing work on a particle. We could also do work on a deformable system, in which parts of the system move with respect to one another. In this case, we also find that Equation 7.17 is valid as long as the net work is found by adding up the works done by each force and adding, as discussed earlier with regard to Equation 7.8.

Equation 7.17 is an important result known as the **work–kinetic energy theorem**:

When work is done on a system and the only change in the system is in its speed, the net work done on the system equals the change in kinetic energy of the system, as expressed by Equation 7.17:

◀ Work–kinetic energy theorem

The work–kinetic energy theorem indicates that the speed of a system *increases* if the net work done on it is *positive* because the final kinetic energy is greater than the initial kinetic energy. The speed *decreases* if the net work is *negative* because the final kinetic energy is less than the initial kinetic energy.

Because we have so far only investigated translational motion through space, we arrived at the work–kinetic energy theorem by analyzing situations involving translational motion. Another type of motion is *rotational motion*, in which an object spins about an axis. We will study this type of motion in Chapter 10. The work–kinetic energy theorem is also valid for systems that undergo a change in the rotational speed due to work done on the system. The windmill in the photograph at the beginning of this chapter is an example of work causing rotational motion.

The work–kinetic energy theorem will clarify a result seen earlier in this chapter that may have seemed odd. In Section 7.4, we arrived at a result of zero net work done when we let a spring push a block from x_{max} to x_{max} . Notice that because the speed of the block is continually changing, it may seem complicated to analyze this process. The quantity W in the work–kinetic energy theorem, however, only refers to the initial and final points for the speeds; it does not depend on details of the path followed between these points. Therefore, because the speed is zero at both the initial and final points of the motion, the net work done on the block is zero. We will often see this concept of path independence in similar approaches to problems.

Let us also return to the mystery in the Finalize step at the end of Example 7.5. Why was the work done by gravity not just the value of the work done by the spring with a positive sign? Notice that the work done by gravity is larger than the magnitude of the work done by the spring. Therefore, the total work done by all forces on the object is positive. Imagine now how to create the situation in which the *only* forces on the object are the spring force and the gravitational force. You must support the object at the highest point and then remove your hand and let the object fall. If you do so, you know that when the object reaches a position 2.0 cm below your hand, it will be *moving*, which is consistent with Equation 7.17. Positive net

Pitfall Prevention 7.5

Conditions for the Work–Kinetic Energy Theorem The work–kinetic energy theorem is important but limited in its application; it is not a general principle. In many situations, other changes in the system occur besides its speed, and there are other interactions with the environment besides work. A more general principle involving energy is *conservation of energy* in Section 8.1.

Pitfall Prevention 7.6

The Work–Kinetic Energy Theorem: Speed, not Velocity The work–kinetic energy theorem relates work to a change in the *speed* of a system, not a change in its velocity. For example, if an object is in uniform circular motion, its speed is constant. Even though its velocity is changing, no work is done on the object by the force causing the circular motion.

work is done on the object, and the result is that it has a kinetic energy as it passes through the 2.0-cm point.

The only way to prevent the object from having a kinetic energy after moving through 2.0 cm is to slowly lower it with your hand. Then, however, there is a third force doing work on the object, the normal force from your hand. If this work is calculated and added to that done by the spring force and the gravitational force, the net work done on the object is zero, which is consistent because it is not moving at the 2.0-cm point.

Earlier, we indicated that work can be considered as a mechanism for transferring energy into a system. Equation 7.17 is a mathematical statement of this concept. When work W_{ext} is done on a system, the result is a transfer of energy across the boundary of the system. The result on the system, in the case of Equation 7.17, is a change ΔK in kinetic energy. In the next section, we investigate another type of energy that can be stored in a system as a result of doing work on the system.

- Quick Quiz 7.5** A dart is inserted into a spring-loaded dart gun by pushing the spring in by a distance x . For the next loading, the spring is compressed a distance $2x$. How much faster does the second dart leave the gun compared with the first? (a) four times as fast (b) two times as fast (c) the same (d) half as fast (e) one-fourth as fast

Example 7.6

A Block Pulled on a Frictionless Surface

AM

A 6.0-kg block initially at rest is pulled to the right along a frictionless, horizontal surface by a constant horizontal force of magnitude 12 N. Find the block's speed after it has moved through a horizontal distance of 3.0 m.

SOLUTION

Conceptualize Figure 7.13 illustrates this situation. Imagine pulling a toy car across a table with a horizontal rubber band attached to the front of the car. The force is maintained constant by ensuring that the stretched rubber band always has the same length.

Categorize We could apply the equations of kinematics to determine the answer, but let us practice the energy approach. The block is the system, and three external forces act on the system. The normal force balances the gravitational force on the block, and neither of these vertically acting forces does work on the block because their points of application are horizontally displaced.

Analyze The net external force acting on the block is the horizontal 12-N force.

Use the work–kinetic energy theorem for the block, noting that its initial kinetic energy is zero:

$$W_{\text{ext}} = \Delta K = K_f - K_i = \frac{1}{2}mv_f^2 - 0 = \frac{1}{2}mv_f^2$$

Solve for v_f and use Equation 7.1 for the work done on the block by \vec{F} :

$$v_f = \sqrt{\frac{2W_{\text{ext}}}{m}} = \sqrt{\frac{2F\Delta x}{m}}$$

Substitute numerical values:

$$v_f = \sqrt{\frac{2(12 \text{ N})(3.0 \text{ m})}{6.0 \text{ kg}}} = 3.5 \text{ m/s}$$

Finalize You should solve this problem again by modeling the block as a *particle under a net force* to find its acceleration and then as a *particle under constant acceleration* to find its final velocity. In Chapter 8, we will see that the energy procedure followed above is an example of the analysis model of the *nonisolated system*.

WHAT IF? Suppose the magnitude of the force in this example is doubled to $F' = 2F$. The 6.0-kg block accelerates to 3.5 m/s due to this applied force while moving through a displacement $\Delta x'$. How does the displacement $\Delta x'$ compare with the original displacement Δx ?

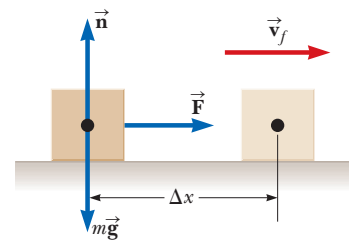


Figure 7.13 (Example 7.6) A block pulled to the right on a frictionless surface by a constant horizontal force.

7.6 continued

Answer If we pull harder, the block should accelerate to a given speed in a shorter distance, so we expect that $\Delta x' < \Delta x$. In both cases, the block experiences the same change in kinetic energy ΔK . Mathematically, from the work–kinetic energy theorem, we find that

$$W_{\text{ext}} = F' \Delta x' = \Delta K = F \Delta x$$

$$\Delta x' = \frac{F}{F'} \Delta x = \frac{F}{2F} \Delta x = \frac{1}{2} \Delta x$$

and the distance is shorter as suggested by our conceptual argument.

Conceptual Example 7.7

Does the Ramp Lessen the Work Required?

A man wishes to load a refrigerator onto a truck using a ramp at angle θ as shown in Figure 7.14. He claims that less work would be required to load the truck if the length L of the ramp were increased. Is his claim valid?

SOLUTION

No. Suppose the refrigerator is wheeled on a hand truck up the ramp at constant speed. In this case, for the system of the refrigerator and the hand truck, $\Delta K = 0$. The normal force exerted by the ramp on the system is directed at 90° to the displacement of its point of application and so does no work on the system. Because $\Delta K = 0$, the work–kinetic energy theorem gives

$$W_{\text{ext}} = W_{\text{by man}} + W_{\text{by gravity}} = 0$$

The work done by the gravitational force equals the product of the weight mg of the system, the distance L through which the refrigerator is displaced, and $\cos(\theta + 90^\circ)$. Therefore,

$$W_{\text{by man}} = -W_{\text{by gravity}} = -(mg)(L)[\cos(\theta + 90^\circ)]$$

$$= mgL \sin \theta = mgh$$

where $h = L \sin \theta$ is the height of the ramp. Therefore, the man must do the same amount of work mgh on the system *regardless* of the length of the ramp. The work depends only on the height of the ramp. Although less force is required with a longer ramp, the point of application of that force moves through a greater displacement.

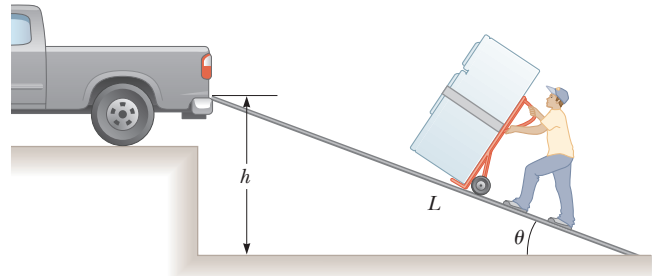


Figure 7.14 (Conceptual Example 7.7) A refrigerator attached to a frictionless, wheeled hand truck is moved up a ramp at constant speed.

7.6 Potential Energy of a System

So far in this chapter, we have defined a system in general, but have focused our attention primarily on single particles or objects under the influence of external forces. Let us now consider systems of two or more particles or objects interacting via a force that is *internal* to the system. The kinetic energy of such a system is the algebraic sum of the kinetic energies of all members of the system. There may be systems, however, in which one object is so massive that it can be modeled as stationary and its kinetic energy can be neglected. For example, if we consider a ball–Earth system as the ball falls to the Earth, the kinetic energy of the system can be considered as just the kinetic energy of the ball. The Earth moves so slowly in this process that we can ignore its kinetic energy. On the other hand, the kinetic energy of a system of two electrons must include the kinetic energies of both particles.

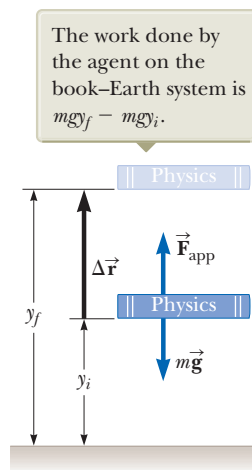


Figure 7.15 An external agent lifts a book slowly from a height y_i to a height y_f .

Pitfall Prevention 7.7

Potential Energy The phrase *potential energy* does not refer to something that has the potential to become energy. Potential energy *is* energy.

Pitfall Prevention 7.8

Potential Energy Belongs to a System Potential energy is always associated with a *system* of two or more interacting objects. When a small object moves near the surface of the Earth under the influence of gravity, we may sometimes refer to the potential energy “associated with the object” rather than the more proper “associated with the system” because the Earth does not move significantly. We will not, however, refer to the potential energy “of the object” because this wording ignores the role of the Earth.

Gravitational potential energy ▶

Let us imagine a system consisting of a book and the Earth, interacting via the gravitational force. We do some work on the system by lifting the book slowly from rest through a vertical displacement $\Delta\vec{r} = (y_f - y_i)\hat{j}$ as in Figure 7.15. According to our discussion of work as an energy transfer, this work done on the system must appear as an increase in energy of the system. The book is at rest before we perform the work and is at rest after we perform the work. Therefore, there is no change in the kinetic energy of the system.

Because the energy change of the system is not in the form of kinetic energy, the work-kinetic energy theorem does not apply here and the energy change must appear as some form of energy storage other than kinetic energy. After lifting the book, we could release it and let it fall back to the position y_i . Notice that the book (and therefore, the system) now has kinetic energy and that its source is in the work that was done in lifting the book. While the book was at the highest point, the system had the *potential* to possess kinetic energy, but it did not do so until the book was allowed to fall. Therefore, we call the energy storage mechanism before the book is released **potential energy**. We will find that the potential energy of a system can only be associated with specific types of forces acting between members of a system. The amount of potential energy in the system is determined by the *configuration* of the system. Moving members of the system to different positions or rotating them may change the configuration of the system and therefore its potential energy.

Let us now derive an expression for the potential energy associated with an object at a given location above the surface of the Earth. Consider an external agent lifting an object of mass m from an initial height y_i above the ground to a final height y_f as in Figure 7.15. We assume the lifting is done slowly, with no acceleration, so the applied force from the agent is equal in magnitude to the gravitational force on the object: the object is modeled as a particle in equilibrium moving at constant velocity. The work done by the external agent on the system (object and the Earth) as the object undergoes this upward displacement is given by the product of the upward applied force \vec{F}_{app} and the upward displacement of this force, $\Delta\vec{r} = \Delta y\hat{j}$:

$$W_{\text{ext}} = (\vec{F}_{\text{app}}) \cdot \Delta\vec{r} = (mg\hat{j}) \cdot [(y_f - y_i)\hat{j}] = mgy_f - mgy_i \quad (7.18)$$

where this result is the net work done on the system because the applied force is the only force on the system from the environment. (Remember that the gravitational force is *internal* to the system.) Notice the similarity between Equation 7.18 and Equation 7.15. In each equation, the work done on a system equals a difference between the final and initial values of a quantity. In Equation 7.15, the work represents a transfer of energy into the system and the increase in energy of the system is kinetic in form. In Equation 7.18, the work represents a transfer of energy into the system and the system energy appears in a different form, which we have called potential energy.

Therefore, we can identify the quantity mgy as the **gravitational potential energy** U_g of the system of an object of mass m and the Earth:

$$U_g \equiv mgy \quad (7.19)$$

The units of gravitational potential energy are joules, the same as the units of work and kinetic energy. Potential energy, like work and kinetic energy, is a scalar quantity. Notice that Equation 7.19 is valid only for objects near the surface of the Earth, where g is approximately constant.³

Using our definition of gravitational potential energy, Equation 7.18 can now be rewritten as

$$W_{\text{ext}} = \Delta U_g \quad (7.20)$$

which mathematically describes that the net external work done on the system in this situation appears as a change in the gravitational potential energy of the system.

Equation 7.20 is similar in form to the work-kinetic energy theorem, Equation 7.17. In Equation 7.17, work is done on a system and energy appears in the system as

³The assumption that g is constant is valid as long as the vertical displacement of the object is small compared with the Earth's radius.

kinetic energy, representing *motion* of the members of the system. In Equation 7.20, work is done on the system and energy appears in the system as potential energy, representing a change in the *configuration* of the members of the system.

Gravitational potential energy depends only on the vertical height of the object above the surface of the Earth. The same amount of work must be done on an object–Earth system whether the object is lifted vertically from the Earth or is pushed starting from the same point up a frictionless incline, ending up at the same height. We verified this statement for a specific situation of rolling a refrigerator up a ramp in Conceptual Example 7.7. This statement can be shown to be true in general by calculating the work done on an object by an agent moving the object through a displacement having both vertical and horizontal components:

$$W_{\text{ext}} = (\vec{\mathbf{F}}_{\text{app}}) \cdot \Delta \vec{\mathbf{r}} = (mg\hat{\mathbf{j}}) \cdot [(x_f - x_i)\hat{\mathbf{i}} + (y_f - y_i)\hat{\mathbf{j}}] = mgy_f - mgy_i$$

where there is no term involving x in the final result because $\hat{\mathbf{j}} \cdot \hat{\mathbf{i}} = 0$.

In solving problems, you must choose a reference configuration for which the gravitational potential energy of the system is set equal to some reference value, which is normally zero. The choice of reference configuration is completely arbitrary because the important quantity is the *difference* in potential energy, and this difference is independent of the choice of reference configuration.

It is often convenient to choose as the reference configuration for zero gravitational potential energy the configuration in which an object is at the surface of the Earth, but this choice is not essential. Often, the statement of the problem suggests a convenient configuration to use.

Quick Quiz 7.6 Choose the correct answer. The gravitational potential energy of a system (a) is always positive (b) is always negative (c) can be negative or positive

Example 7.8 The Proud Athlete and the Sore Toe

A trophy being shown off by a careless athlete slips from the athlete's hands and drops on his foot. Choosing floor level as the $y = 0$ point of your coordinate system, estimate the change in gravitational potential energy of the trophy–Earth system as the trophy falls. Repeat the calculation, using the top of the athlete's head as the origin of coordinates.

SOLUTION

Conceptualize The trophy changes its vertical position with respect to the surface of the Earth. Associated with this change in position is a change in the gravitational potential energy of the trophy–Earth system.

Categorize We evaluate a change in gravitational potential energy defined in this section, so we categorize this example as a substitution problem. Because there are no numbers provided in the problem statement, it is also an estimation problem.

The problem statement tells us that the reference configuration of the trophy–Earth system corresponding to zero potential energy is when the bottom of the trophy is at the floor. To find the change in potential energy for the system, we need to estimate a few values. Let's say the trophy has a mass of approximately 2 kg, and the top of a person's foot is about 0.05 m above the floor. Also, let's assume the trophy falls from a height of 1.4 m.

Calculate the gravitational potential energy of the trophy–Earth system just before the trophy is released:

$$U_i = mgy_i = (2 \text{ kg})(9.80 \text{ m/s}^2)(1.4 \text{ m}) = 27.4 \text{ J}$$

Calculate the gravitational potential energy of the trophy–Earth system when the trophy reaches the athlete's foot:

$$U_f = mgy_f = (2 \text{ kg})(9.80 \text{ m/s}^2)(0.05 \text{ m}) = 0.98 \text{ J}$$

Evaluate the change in gravitational potential energy of the trophy–Earth system:

$$\Delta U_g = 0.98 \text{ J} - 27.4 \text{ J} = -26.4 \text{ J}$$

continued

7.8 continued

We should probably keep only two digits because of the roughness of our estimates; therefore, we estimate that the change in gravitational potential energy is -26 J . The system had about 27 J of gravitational potential energy before the trophy began its fall and approximately 1 J of potential energy as the trophy reaches the top of the foot.

The second case presented indicates that the reference configuration of the system for zero potential energy is chosen to be when the trophy is on the athlete's head (even though the trophy is never at this position in its motion). We estimate this position to be 2.0 m above the floor).

Calculate the gravitational potential energy of the trophy–Earth system just before the trophy is released from its position 0.6 m below the athlete's head:

$$U_i = mgy_i = (2 \text{ kg})(9.80 \text{ m/s}^2)(-0.6 \text{ m}) = -11.8 \text{ J}$$

Calculate the gravitational potential energy of the trophy–Earth system when the trophy reaches the athlete's foot located 1.95 m below its initial position:

$$U_f = mgy_f = (2 \text{ kg})(9.80 \text{ m/s}^2)(-1.95 \text{ m}) = -38.2 \text{ J}$$

Evaluate the change in gravitational potential energy of the trophy–Earth system:

$$\Delta U_g = -38.2 \text{ J} - (-11.8 \text{ J}) = -26.4 \text{ J} \approx -26 \text{ J}$$

This value is the same as before, as it must be. The change in potential energy is independent of the choice of configuration of the system representing the zero of potential energy. If we wanted to keep only one digit in our estimates, we could write the final result as $3 \times 10^1 \text{ J}$.

Elastic Potential Energy

Because members of a system can interact with one another by means of different types of forces, it is possible that there are different types of potential energy in a system. We have just become familiar with gravitational potential energy of a system in which members interact via the gravitational force. Let us explore a second type of potential energy that a system can possess.

Consider a system consisting of a block and a spring as shown in Figure 7.16. In Section 7.4, we identified *only* the block as the system. Now we include both the block and the spring in the system and recognize that the spring force is the interaction between the two members of the system. The force that the spring exerts on the block is given by $F_s = -kx$ (Eq. 7.9). The external work done by an applied force F_{app} on the block–spring system is given by Equation 7.13:

$$W_{\text{ext}} = \frac{1}{2}kx_f^2 - \frac{1}{2}kx_i^2 \quad (7.21)$$

In this situation, the initial and final x coordinates of the block are measured from its equilibrium position, $x = 0$. Again (as in the gravitational case, Eq. 7.18) the work done on the system is equal to the difference between the initial and final values of an expression related to the system's configuration. The **elastic potential energy** function associated with the block–spring system is defined by

Elastic potential energy ►

$$U_s \equiv \frac{1}{2}kx^2 \quad (7.22)$$

Equation 7.21 can be expressed as

$$W_{\text{ext}} = \Delta U_s \quad (7.23)$$

Compare this equation to Equations 7.17 and 7.20. In all three situations, external work is done on a system and a form of energy storage in the system changes as a result.

The elastic potential energy of the system can be thought of as the energy stored in the deformed spring (one that is either compressed or stretched from its equilibrium position). The elastic potential energy stored in a spring is zero whenever the spring is undeformed ($x = 0$). Energy is stored in the spring only when the spring is

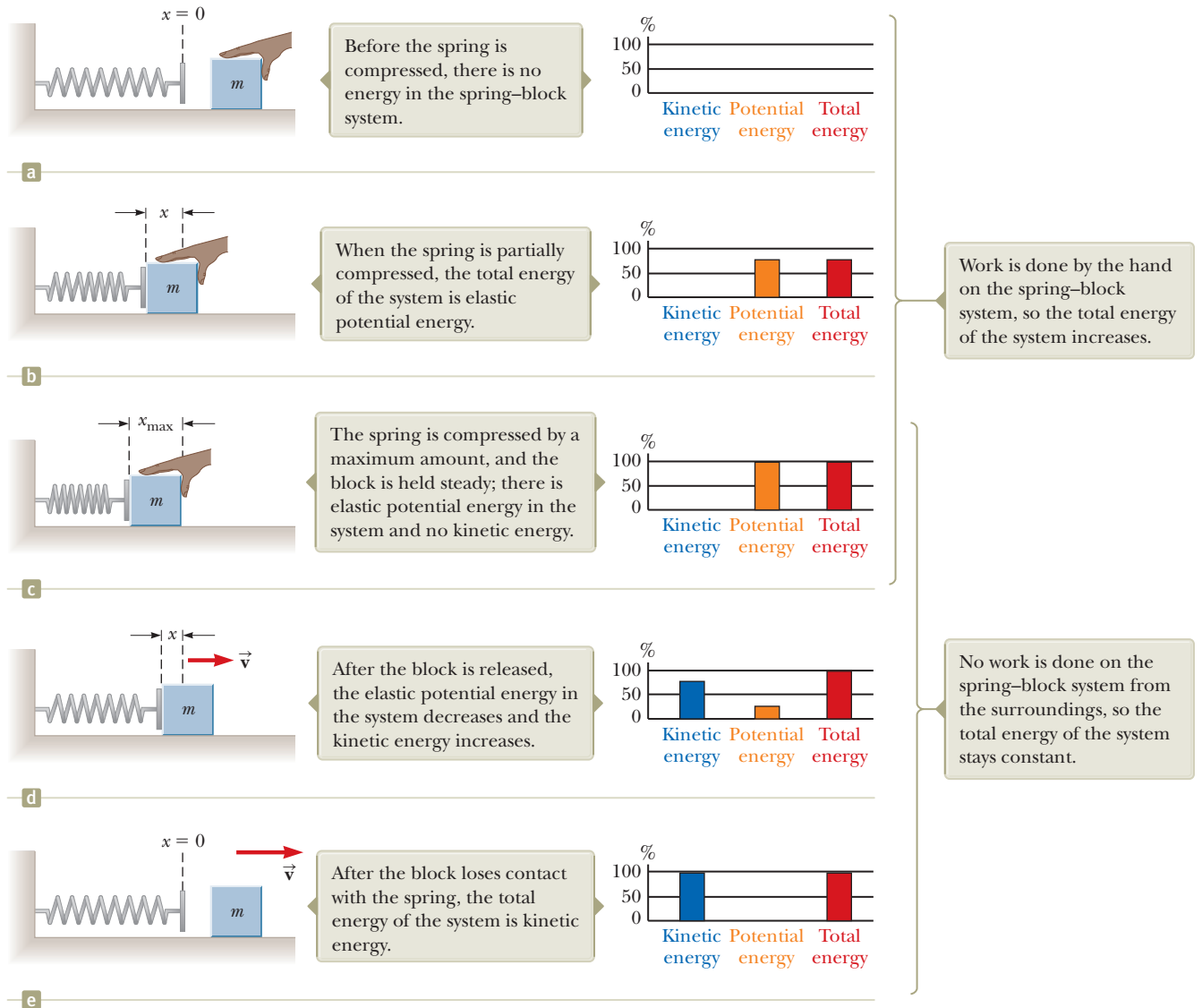


Figure 7.16 A spring on a frictionless, horizontal surface is compressed a distance x_{\max} when a block of mass m is pushed against it. The block is then released and the spring pushes it to the right, where the block eventually loses contact with the spring. Parts (a) through (e) show various instants in the process. Energy bar charts on the right of each part of the figure help keep track of the energy in the system.

either stretched or compressed. Because the elastic potential energy is proportional to x^2 , we see that U_s is always positive in a deformed spring. Everyday examples of the storage of elastic potential energy can be found in old-style clocks or watches that operate from a wound-up spring and small wind-up toys for children.

Consider Figure 7.16 once again, which shows a spring on a frictionless, horizontal surface. When a block is pushed against the spring by an external agent, the elastic potential energy and the total energy of the system increase as indicated in Figure 7.16b. When the spring is compressed a distance x_{\max} (Fig. 7.16c), the elastic potential energy stored in the spring is $\frac{1}{2}kx_{\max}^2$. When the block is released from rest, the spring exerts a force on the block and pushes the block to the right. The elastic potential energy of the system decreases, whereas the kinetic energy increases and the total energy remains fixed (Fig. 7.16d). When the spring returns to its original length, the stored elastic potential energy is completely transformed into kinetic energy of the block (Fig. 7.16e).

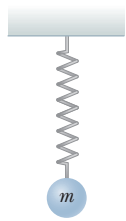


Figure 7.17 (Quick Quiz 7.7) A ball connected to a massless spring suspended vertically. What forms of potential energy are associated with the system when the ball is displaced downward?

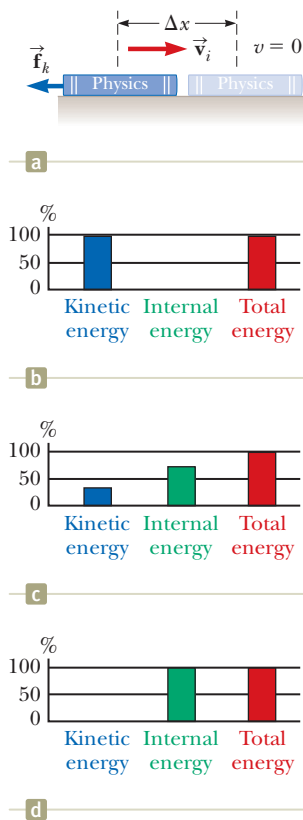


Figure 7.18 (a) A book sliding to the right on a horizontal surface slows down in the presence of a force of kinetic friction acting to the left. (b) An energy bar chart showing the energy in the system of the book and the surface at the initial instant of time. The energy of the system is all kinetic energy. (c) While the book is sliding, the kinetic energy of the system decreases as it is transformed to internal energy. (d) After the book has stopped, the energy of the system is all internal energy.

- Quick Quiz 7.7** A ball is connected to a light spring suspended vertically as shown in Figure 7.17. When pulled downward from its equilibrium position and released, the ball oscillates up and down. (i) In the system of *the ball, the spring, and the Earth*, what forms of energy are there during the motion? (a) kinetic and elastic potential (b) kinetic and gravitational potential (c) kinetic, elastic potential, and gravitational potential (d) elastic potential and gravitational potential (ii) In the system of *the ball and the spring*, what forms of energy are there during the motion? Choose from the same possibilities (a) through (d).

Energy Bar Charts

Figure 7.16 shows an important graphical representation of information related to energy of systems called an **energy bar chart**. The vertical axis represents the amount of energy of a given type in the system. The horizontal axis shows the types of energy in the system. The bar chart in Figure 7.16a shows that the system contains zero energy because the spring is relaxed and the block is not moving. Between Figure 7.16a and Figure 7.16c, the hand does work on the system, compressing the spring and storing elastic potential energy in the system. In Figure 7.16d, the block has been released and is moving to the right while still in contact with the spring. The height of the bar for the elastic potential energy of the system decreases, the kinetic energy bar increases, and the total energy bar remains fixed. In Figure 7.16e, the spring has returned to its relaxed length and the system now contains only kinetic energy associated with the moving block.

Energy bar charts can be a very useful representation for keeping track of the various types of energy in a system. For practice, try making energy bar charts for the book–Earth system in Figure 7.15 when the book is dropped from the higher position. Figure 7.17 associated with Quick Quiz 7.7 shows another system for which drawing an energy bar chart would be a good exercise. We will show energy bar charts in some figures in this chapter. Some figures will not show a bar chart in the text but will include one in animated versions that appear in Enhanced WebAssign.

7.7 Conservative and Nonconservative Forces

We now introduce a third type of energy that a system can possess. Imagine that the book in Figure 7.18a has been accelerated by your hand and is now sliding to the right on the surface of a heavy table and slowing down due to the friction force. Suppose the *surface* is the system. Then the friction force from the sliding book does work on the surface. The force on the surface is to the right and the displacement of the point of application of the force is to the right because the book has moved to the right. The work done on the surface is therefore positive, but the surface is not moving after the book has stopped. Positive work has been done on the surface, yet there is no increase in the surface's kinetic energy or the potential energy of any system. So where is the energy?

From your everyday experience with sliding over surfaces with friction, you can probably guess that the surface will be *warmer* after the book slides over it. The work that was done on the surface has gone into warming the surface rather than increasing its speed or changing the configuration of a system. We call the energy associated with the temperature of a system its **internal energy**, symbolized E_{int} . (We will define internal energy more generally in Chapter 20.) In this case, the work done on the surface does indeed represent energy transferred into the system, but it appears in the system as internal energy rather than kinetic or potential energy.

Now consider the book and the surface in Figure 7.18a together as a system. Initially, the system has kinetic energy because the book is moving. While the book is sliding, the internal energy of the system increases: the book and the surface are warmer than before. When the book stops, the kinetic energy has been completely

transformed to internal energy. We can consider the nonconservative force within the system—that is, between the book and the surface—as a *transformation mechanism* for energy. This nonconservative force transforms the kinetic energy of the system into internal energy. Rub your hands together briskly to experience this effect!

Figures 7.18b through 7.18d show energy bar charts for the situation in Figure 7.18a. In Figure 7.18b, the bar chart shows that the system contains kinetic energy at the instant the book is released by your hand. We define the reference amount of internal energy in the system as zero at this instant. Figure 7.18c shows the kinetic energy transforming to internal energy as the book slows down due to the friction force. In Figure 7.18d, after the book has stopped sliding, the kinetic energy is zero, and the system now contains only internal energy E_{int} . Notice that the total energy bar in red has not changed during the process. The amount of internal energy in the system after the book has stopped is equal to the amount of kinetic energy in the system at the initial instant. This equality is described by an important principle called *conservation of energy*. We will explore this principle in Chapter 8.

Now consider in more detail an object moving downward near the surface of the Earth. The work done by the gravitational force on the object does not depend on whether it falls vertically or slides down a sloping incline with friction. All that matters is the change in the object's elevation. The energy transformation to internal energy due to friction on that incline, however, depends very much on the distance the object slides. The longer the incline, the more potential energy is transformed to internal energy. In other words, the path makes no difference when we consider the work done by the gravitational force, but it does make a difference when we consider the energy transformation due to friction forces. We can use this varying dependence on path to classify forces as either *conservative* or *nonconservative*. Of the two forces just mentioned, the gravitational force is conservative and the friction force is nonconservative.

Conservative Forces

Conservative forces have these two equivalent properties:

1. The work done by a conservative force on a particle moving between any two points is independent of the path taken by the particle.
2. The work done by a conservative force on a particle moving through any closed path is zero. (A closed path is one for which the beginning point and the endpoint are identical.)

The gravitational force is one example of a conservative force; the force that an ideal spring exerts on any object attached to the spring is another. The work done by the gravitational force on an object moving between any two points near the Earth's surface is $W_g = -mg\hat{\mathbf{j}} \cdot [(y_f - y_i)\hat{\mathbf{j}}] = mgy_i - mgy_f$. From this equation, notice that W_g depends only on the initial and final y coordinates of the object and hence is independent of the path. Furthermore, W_g is zero when the object moves over any closed path (where $y_i = y_f$).

For the case of the object–spring system, the work W_s done by the spring force is given by $W_s = \frac{1}{2}kx_i^2 - \frac{1}{2}kx_f^2$ (Eq. 7.12). We see that the spring force is conservative because W_s depends only on the initial and final x coordinates of the object and is zero for any closed path.

We can associate a potential energy for a system with a force acting between members of the system, but we can do so only if the force is conservative. In general, the work W_{int} done by a conservative force on an object that is a member of a system as the system changes from one configuration to another is equal to the initial value of the potential energy of the system minus the final value:

$$W_{\text{int}} = U_i - U_f = -\Delta U \quad (7.24)$$

The subscript “int” in Equation 7.24 reminds us that the work we are discussing is done by one member of the system on another member and is therefore *internal* to

Properties of conservative forces

Pitfall Prevention 7.9

Similar Equation Warning Compare Equation 7.24 with Equation 7.20. These equations are similar except for the negative sign, which is a common source of confusion. Equation 7.20 tells us that positive work done *by an outside agent* on a system causes an increase in the potential energy of the system (with no change in the kinetic or internal energy). Equation 7.24 states that positive work done on a component of a system by a conservative force *internal to the system* causes a decrease in the potential energy of the system.

the system. It is different from the work W_{ext} done *on* the system as a whole by an external agent. As an example, compare Equation 7.24 with the equation for the work done by an external agent on a block–spring system (Eq. 7.23) as the extension of the spring changes.

Nonconservative Forces

A force is **nonconservative** if it does not satisfy properties 1 and 2 above. The work done by a nonconservative force is path-dependent. We define the sum of the kinetic and potential energies of a system as the **mechanical energy** of the system:

$$E_{\text{mech}} \equiv K + U \quad (7.25)$$

where K includes the kinetic energy of all moving members of the system and U includes all types of potential energy in the system. For a book falling under the action of the gravitational force, the mechanical energy of the book–Earth system remains fixed; gravitational potential energy transforms to kinetic energy, and the total energy of the system remains constant. Nonconservative forces acting within a system, however, cause a *change* in the mechanical energy of the system. For example, for a book sent sliding on a horizontal surface that is not frictionless (Fig. 7.18a), the mechanical energy of the book–surface system is transformed to internal energy as we discussed earlier. Only part of the book’s kinetic energy is transformed to internal energy in the book. The rest appears as internal energy in the surface. (When you trip and slide across a gymnasium floor, not only does the skin on your knees warm up, so does the floor!) Because the force of kinetic friction transforms the mechanical energy of a system into internal energy, it is a nonconservative force.

As an example of the path dependence of the work for a nonconservative force, consider Figure 7.19. Suppose you displace a book between two points on a table. If the book is displaced in a straight line along the blue path between points Ⓐ and Ⓑ in Figure 7.19, you do a certain amount of work against the kinetic friction force to keep the book moving at a constant speed. Now, imagine that you push the book along the brown semicircular path in Figure 7.19. You perform more work against friction along this curved path than along the straight path because the curved path is longer. The work done on the book depends on the path, so the friction force *cannot* be conservative.

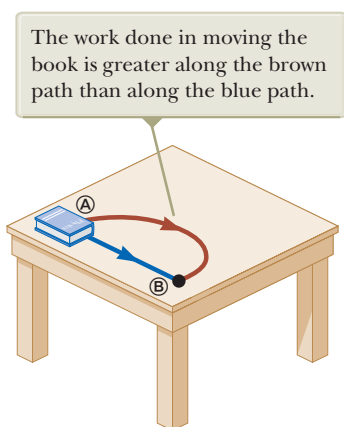


Figure 7.19 The work done against the force of kinetic friction depends on the path taken as the book is moved from Ⓐ to Ⓑ.

7.8 Relationship Between Conservative Forces and Potential Energy

In the preceding section, we found that the work done on a member of a system by a conservative force between the members of the system does not depend on the path taken by the moving member. The work depends only on the initial and final coordinates. For such a system, we can define a **potential energy function** U such that the work done within the system by the conservative force equals the negative of the change in the potential energy of the system according to Equation 7.24. Let us imagine a system of particles in which a conservative force \vec{F} acts between the particles. Imagine also that the configuration of the system changes due to the motion of one particle along the x axis. Then we can evaluate the internal work done by this force as the particle moves along the x axis⁴ using Equations 7.7 and 7.24:

$$W_{\text{int}} = \int_{x_i}^{x_f} F_x dx = -\Delta U \quad (7.26)$$

⁴For a general displacement, the work done in two or three dimensions also equals $-\Delta U$, where $U = U(x, y, z)$. We write this equation formally as $W_{\text{int}} = \int_i^f \vec{F} \cdot d\vec{r} = U_i - U_f$.

where F_x is the component of \vec{F} in the direction of the displacement. We can also express Equation 7.26 as

$$\Delta U = U_f - U_i = - \int_{x_i}^{x_f} F_x dx \quad (7.27)$$

Therefore, ΔU is negative when F_x and dx are in the same direction, as when an object is lowered in a gravitational field or when a spring pushes an object toward equilibrium.

It is often convenient to establish some particular location x_i of one member of a system as representing a reference configuration and measure all potential energy differences with respect to it. We can then define the potential energy function as

$$U_f(x) = - \int_{x_i}^{x_f} F_x dx + U_i \quad (7.28)$$

The value of U_i is often taken to be zero for the reference configuration. It does not matter what value we assign to U_i because any nonzero value merely shifts $U_f(x)$ by a constant amount and only the *change* in potential energy is physically meaningful.

If the point of application of the force undergoes an infinitesimal displacement dx , we can express the infinitesimal change in the potential energy of the system dU as

$$dU = -F_x dx$$

Therefore, the conservative force is related to the potential energy function through the relationship⁵

$$F_x = - \frac{dU}{dx} \quad (7.29)$$

That is, the x component of a conservative force acting on a member within a system equals the negative derivative of the potential energy of the system with respect to x .

We can easily check Equation 7.29 for the two examples already discussed. In the case of the deformed spring, $U_s = \frac{1}{2}kx^2$; therefore,

$$F_s = - \frac{dU_s}{dx} = - \frac{d}{dx} \left(\frac{1}{2}kx^2 \right) = -kx$$

which corresponds to the restoring force in the spring (Hooke's law). Because the gravitational potential energy function is $U_g = mgy$, it follows from Equation 7.29 that $F_g = -mg$ when we differentiate U_g with respect to y instead of x .

We now see that U is an important function because a conservative force can be derived from it. Furthermore, Equation 7.29 should clarify that adding a constant to the potential energy is unimportant because the derivative of a constant is zero.

- Quick Quiz 7.8** What does the slope of a graph of $U(x)$ versus x represent? (a) the magnitude of the force on the object (b) the negative of the magnitude of the force on the object (c) the x component of the force on the object (d) the negative of the x component of the force on the object

7.9 Energy Diagrams and Equilibrium of a System

The motion of a system can often be understood qualitatively through a graph of its potential energy versus the position of a member of the system. Consider the potential

⁵In three dimensions, the expression is

$$\vec{F} = - \frac{\partial U}{\partial x} \hat{i} - \frac{\partial U}{\partial y} \hat{j} - \frac{\partial U}{\partial z} \hat{k}$$

where $(\partial U / \partial x)$ and so forth are partial derivatives. In the language of vector calculus, \vec{F} equals the negative of the *gradient* of the scalar quantity $U(x, y, z)$.

◀ Relation of force between members of a system to the potential energy of the system

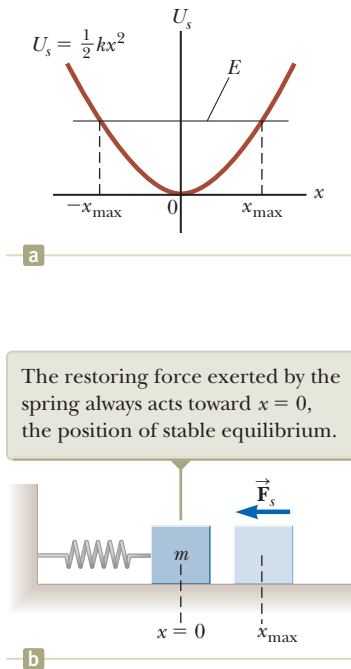


Figure 7.20 (a) Potential energy as a function of x for the frictionless block–spring system shown in (b). For a given energy E of the system, the block oscillates between the turning points, which have the coordinates $x = \pm x_{\max}$.

Pitfall Prevention 7.10

Energy Diagrams A common mistake is to think that potential energy on the graph in an energy diagram represents the height of some object. For example, that is not the case in Figure 7.20, where the block is only moving horizontally.

energy function for a block–spring system, given by $U_s = \frac{1}{2}kx^2$. This function is plotted versus x in Figure 7.20a, where x is the position of the block. The force F_s exerted by the spring on the block is related to U_s through Equation 7.29:

$$F_s = -\frac{dU_s}{dx} = -kx$$

As we saw in Quick Quiz 7.8, the x component of the force is equal to the negative of the slope of the U -versus- x curve. When the block is placed at rest at the equilibrium position of the spring ($x = 0$), where $F_s = 0$, it will remain there unless some external force F_{ext} acts on it. If this external force stretches the spring from equilibrium, x is positive and the slope dU/dx is positive; therefore, the force F_s exerted by the spring is negative and the block accelerates back toward $x = 0$ when released. If the external force compresses the spring, x is negative and the slope is negative; therefore, F_s is positive and again the mass accelerates toward $x = 0$ upon release.

From this analysis, we conclude that the $x = 0$ position for a block–spring system is one of **stable equilibrium**. That is, any movement away from this position results in a force directed back toward $x = 0$. In general, configurations of a system in stable equilibrium correspond to those for which $U(x)$ for the system is a minimum.

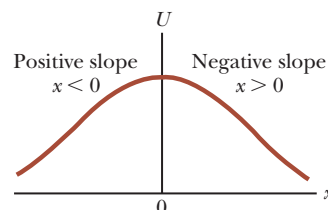
If the block in Figure 7.20 is moved to an initial position x_{\max} and then released from rest, its total energy initially is the potential energy $\frac{1}{2}kx_{\max}^2$ stored in the spring. As the block starts to move, the system acquires kinetic energy and loses potential energy. The block oscillates (moves back and forth) between the two points $x = -x_{\max}$ and $x = +x_{\max}$, called the *turning points*. In fact, because no energy is transformed to internal energy due to friction, the block oscillates between $-x_{\max}$ and $+x_{\max}$ forever. (We will discuss these oscillations further in Chapter 15.)

Another simple mechanical system with a configuration of stable equilibrium is a ball rolling about in the bottom of a bowl. Anytime the ball is displaced from its lowest position, it tends to return to that position when released.

Now consider a particle moving along the x axis under the influence of a conservative force F_x , where the U -versus- x curve is as shown in Figure 7.21. Once again, $F_x = 0$ at $x = 0$, and so the particle is in equilibrium at this point. This position, however, is one of **unstable equilibrium** for the following reason. Suppose the particle is displaced to the right ($x > 0$). Because the slope is negative for $x > 0$, $F_x = -dU/dx$ is positive and the particle accelerates away from $x = 0$. If instead the particle is at $x = 0$ and is displaced to the left ($x < 0$), the force is negative because the slope is positive for $x < 0$ and the particle again accelerates away from the equilibrium position. The position $x = 0$ in this situation is one of unstable equilibrium because for any displacement from this point, the force pushes the particle farther away from equilibrium and toward a position of lower potential energy. A pencil balanced on its point is in a position of unstable equilibrium. If the pencil is displaced slightly from its absolutely vertical position and is then released, it will surely fall over. In general, configurations of a system in unstable equilibrium correspond to those for which $U(x)$ for the system is a maximum.

Finally, a configuration called **neutral equilibrium** arises when U is constant over some region. Small displacements of an object from a position in this region produce neither restoring nor disrupting forces. A ball lying on a flat, horizontal surface is an example of an object in neutral equilibrium.

Figure 7.21 A plot of U versus x for a particle that has a position of unstable equilibrium located at $x = 0$. For any finite displacement of the particle, the force on the particle is directed away from $x = 0$.



Example 7.9 Force and Energy on an Atomic Scale

The potential energy associated with the force between two neutral atoms in a molecule can be modeled by the Lennard–Jones potential energy function:

$$U(x) = 4\epsilon \left[\left(\frac{\sigma}{x} \right)^{12} - \left(\frac{\sigma}{x} \right)^6 \right]$$

where x is the separation of the atoms. The function $U(x)$ contains two parameters σ and ϵ that are determined from experiments. Sample values for the interaction between two atoms in a molecule are $\sigma = 0.263$ nm and $\epsilon = 1.51 \times 10^{-22}$ J. Using a spreadsheet or similar tool, graph this function and find the most likely distance between the two atoms.

SOLUTION

Conceptualize We identify the two atoms in the molecule as a system. Based on our understanding that stable molecules exist, we expect to find stable equilibrium when the two atoms are separated by some equilibrium distance.

Categorize Because a potential energy function exists, we categorize the force between the atoms as conservative. For a conservative force, Equation 7.29 describes the relationship between the force and the potential energy function.

Analyze Stable equilibrium exists for a separation distance at which the potential energy of the system of two atoms (the molecule) is a minimum.

Take the derivative of the function $U(x)$:

$$\frac{dU(x)}{dx} = 4\epsilon \frac{d}{dx} \left[\left(\frac{\sigma}{x} \right)^{12} - \left(\frac{\sigma}{x} \right)^6 \right] = 4\epsilon \left[\frac{-12\sigma^{12}}{x^{13}} + \frac{6\sigma^6}{x^7} \right]$$

Minimize the function $U(x)$ by setting its derivative equal to zero:

$$4\epsilon \left[\frac{-12\sigma^{12}}{x_{\text{eq}}^{13}} + \frac{6\sigma^6}{x_{\text{eq}}^7} \right] = 0 \quad \rightarrow \quad x_{\text{eq}} = (2)^{1/6}\sigma$$

Evaluate x_{eq} , the equilibrium separation of the two atoms in the molecule:

$$x_{\text{eq}} = (2)^{1/6}(0.263 \text{ nm}) = 2.95 \times 10^{-10} \text{ m}$$

We graph the Lennard–Jones function on both sides of this critical value to create our energy diagram as shown in Figure 7.22.

Finalize Notice that $U(x)$ is extremely large when the atoms are very close together, is a minimum when the atoms are at their critical separation, and then increases again as the atoms move apart. When $U(x)$ is a minimum, the atoms are in stable equilibrium, indicating that the most likely separation between them occurs at this point.

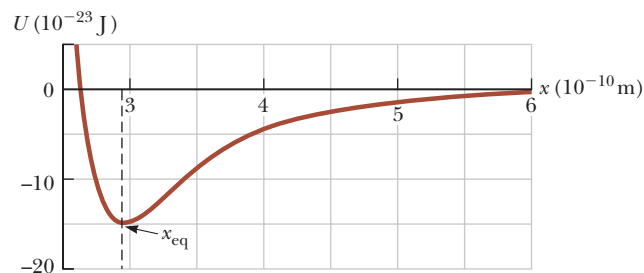


Figure 7.22 (Example 7.9) Potential energy curve associated with a molecule. The distance x is the separation between the two atoms making up the molecule.

Summary

Definitions

■ A **system** is most often a single particle, a collection of particles, or a region of space, and may vary in size and shape. A **system boundary** separates the system from the **environment**.

■ The **work** W done on a system by an agent exerting a constant force \vec{F} on the system is the product of the magnitude Δr of the displacement of the point of application of the force and the component $F \cos \theta$ of the force along the direction of the displacement $\Delta \vec{r}$:

$$W \equiv F \Delta r \cos \theta \quad (7.1)$$

continued

■ If a varying force does work on a particle as the particle moves along the x axis from x_i to x_f , the work done by the force on the particle is given by

$$W = \int_{x_i}^{x_f} F_x dx \quad (7.7)$$

where F_x is the component of force in the x direction.

■ The **kinetic energy** of a particle of mass m moving with a speed v is

$$K \equiv \frac{1}{2}mv^2 \quad (7.16)$$

■ A force is **conservative** if the work it does on a particle that is a member of the system as the particle moves between two points is independent of the path the particle takes between the two points. Furthermore, a force is conservative if the work it does on a particle is zero when the particle moves through an arbitrary closed path and returns to its initial position. A force that does not meet these criteria is said to be **nonconservative**.

■ The **scalar product** (dot product) of two vectors \vec{A} and \vec{B} is defined by the relationship

$$\vec{A} \cdot \vec{B} \equiv AB \cos \theta \quad (7.2)$$

where the result is a scalar quantity and θ is the angle between the two vectors. The scalar product obeys the commutative and distributive laws.

■ If a particle of mass m is at a distance y above the Earth's surface, the **gravitational potential energy** of the particle–Earth system is

$$U_g \equiv mgy \quad (7.19)$$

The **elastic potential energy** stored in a spring of force constant k is

$$U_s \equiv \frac{1}{2}kx^2 \quad (7.22)$$

■ The **total mechanical energy of a system** is defined as the sum of the kinetic energy and the potential energy:

$$E_{\text{mech}} \equiv K + U \quad (7.25)$$

Concepts and Principles

■ The **work–kinetic energy theorem** states that if work is done on a system by external forces and the only change in the system is in its speed,

$$W_{\text{ext}} = K_f - K_i = \Delta K = \frac{1}{2}mv_f^2 - \frac{1}{2}mv_i^2 \quad (7.15, 7.17)$$

■ A **potential energy function** U can be associated only with a conservative force. If a conservative force \vec{F} acts between members of a system while one member moves along the x axis from x_i to x_f , the change in the potential energy of the system equals the negative of the work done by that force:

$$U_f - U_i = - \int_{x_i}^{x_f} F_x dx \quad (7.27)$$

■ Systems can be in three types of equilibrium configurations when the net force on a member of the system is zero. Configurations of **stable equilibrium** correspond to those for which $U(x)$ is a minimum.

■ Configurations of **unstable equilibrium** correspond to those for which $U(x)$ is a maximum.

■ **Neutral equilibrium** arises when U is constant as a member of the system moves over some region.

Objective Questions

1. denotes answer available in *Student Solutions Manual/Study Guide*

1. Alex and John are loading identical cabinets onto a truck. Alex lifts his cabinet straight up from the ground to the bed of the truck, whereas John slides his cabinet up a rough ramp to the truck. Which statement is correct about the work done on the cabinet–Earth system? (a) Alex and John do the same amount of work. (b) Alex does more work than John. (c) John does more work than Alex. (d) None of those state-

ments is necessarily true because the force of friction is unknown. (e) None of those statements is necessarily true because the angle of the incline is unknown.

2. If the net work done by external forces on a particle is zero, which of the following statements about the particle must be true? (a) Its velocity is zero. (b) Its velocity is decreased. (c) Its velocity is unchanged. (d) Its speed is unchanged. (e) More information is needed.

3. A worker pushes a wheelbarrow with a horizontal force of 50 N on level ground over a distance of 5.0 m. If a friction force of 43 N acts on the wheelbarrow in a direction opposite that of the worker, what work is done on the wheelbarrow by the worker? (a) 250 J (b) 215 J (c) 35 J (d) 10 J (e) None of those answers is correct.
4. A cart is set rolling across a level table, at the same speed on every trial. If it runs into a patch of sand, the cart exerts on the sand an average horizontal force of 6 N and travels a distance of 6 cm through the sand as it comes to a stop. If instead the cart runs into a patch of gravel on which the cart exerts an average horizontal force of 9 N, how far into the gravel will the cart roll before stopping? (a) 9 cm (b) 6 cm (c) 4 cm (d) 3 cm (e) none of those answers
5. Let \hat{N} represent the direction horizontally north, \hat{NE} represent northeast (halfway between north and east), and so on. Each direction specification can be thought of as a unit vector. Rank from the largest to the smallest the following dot products. Note that zero is larger than a negative number. If two quantities are equal, display that fact in your ranking. (a) $\hat{N} \cdot \hat{N}$ (b) $\hat{N} \cdot \hat{NE}$ (c) $\hat{N} \cdot \hat{S}$ (d) $\hat{N} \cdot \hat{E}$ (e) $\hat{SE} \cdot \hat{S}$
6. Is the work required to be done by an external force on an object on a frictionless, horizontal surface to accelerate it from a speed v to a speed $2v$ (a) equal to the work required to accelerate the object from $v = 0$ to v , (b) twice the work required to accelerate the object from $v = 0$ to v , (c) three times the work required to accelerate the object from $v = 0$ to v , (d) four times the work required to accelerate the object from 0 to v , or (e) not known without knowledge of the acceleration?
7. A block of mass m is dropped from the fourth floor of an office building and hits the sidewalk below at speed v . From what floor should the block be dropped to double that impact speed? (a) the sixth floor (b) the eighth floor (c) the tenth floor (d) the twelfth floor (e) the sixteenth floor
8. As a simple pendulum swings back and forth, the forces acting on the suspended object are (a) the gravitational force, (b) the tension in the supporting cord, and (c) air resistance. (i) Which of these forces, if any, does no work on the pendulum at any time? (ii) Which of these forces does negative work on the pendulum at all times during its motion?
9. Bullet 2 has twice the mass of bullet 1. Both are fired so that they have the same speed. If the kinetic energy of bullet 1 is K , is the kinetic energy of bullet 2 (a) $0.25K$, (b) $0.5K$, (c) $0.71K$, (d) K , or (e) $2K$?
10. Figure OQ7.10 shows a light extended spring exerting a force F_s to the left on a block. (i) Does the block exert a force on the spring? Choose every correct answer. (a) No, it doesn't. (b) Yes, it does, to the left. (c) Yes, it does, to the right. (d) Yes, it does, and its magnitude is larger than F_s . (e) Yes, it does, and its magnitude is equal to F_s . (ii) Does the spring exert a force

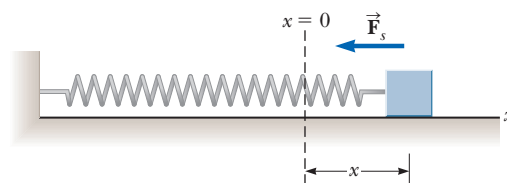


Figure OQ7.10

on the wall? Choose your answers from the same list (a) through (e).

11. If the speed of a particle is doubled, what happens to its kinetic energy? (a) It becomes four times larger. (b) It becomes two times larger. (c) It becomes $\sqrt{2}$ times larger. (d) It is unchanged. (e) It becomes half as large.
12. Mark and David are loading identical cement blocks onto David's pickup truck. Mark lifts his block straight up from the ground to the truck, whereas David slides his block up a ramp containing frictionless rollers. Which statement is true about the work done on the block–Earth system? (a) Mark does more work than David. (b) Mark and David do the same amount of work. (c) David does more work than Mark. (d) None of those statements is necessarily true because the angle of the incline is unknown. (e) None of those statements is necessarily true because the mass of one block is not given.
13. (i) Rank the gravitational accelerations you would measure for the following falling objects: (a) a 2-kg object 5 cm above the floor, (b) a 2-kg object 120 cm above the floor, (c) a 3-kg object 120 cm above the floor, and (d) a 3-kg object 80 cm above the floor. List the one with the largest magnitude of acceleration first. If any are equal, show their equality in your list. (ii) Rank the gravitational forces on the same four objects, listing the one with the largest magnitude first. (iii) Rank the gravitational potential energies (of the object–Earth system) for the same four objects, largest first, taking $y = 0$ at the floor.
14. A certain spring that obeys Hooke's law is stretched by an external agent. The work done in stretching the spring by 10 cm is 4 J. How much additional work is required to stretch the spring an additional 10 cm? (a) 2 J (b) 4 J (c) 8 J (d) 12 J (e) 16 J
15. A cart is set rolling across a level table, at the same speed on every trial. If it runs into a patch of sand, the cart exerts on the sand an average horizontal force of 6 N and travels a distance of 6 cm through the sand as it comes to a stop. If instead the cart runs into a patch of flour, it rolls an average of 18 cm before stopping. What is the average magnitude of the horizontal force the cart exerts on the flour? (a) 2 N (b) 3 N (c) 6 N (d) 18 N (e) none of those answers
16. An ice cube has been given a push and slides without friction on a level table. Which is correct? (a) It is in stable equilibrium. (b) It is in unstable equilibrium. (c) It is in neutral equilibrium. (d) It is not in equilibrium.

Conceptual Questions

1. denotes answer available in *Student Solutions Manual/Study Guide*

- Can a normal force do work? If not, why not? If so, give an example.
- Object 1 pushes on object 2 as the objects move together, like a bulldozer pushing a stone. Assume object 1 does 15.0 J of work on object 2. Does object 2 do work on object 1? Explain your answer. If possible, determine how much work and explain your reasoning.
- A student has the idea that the total work done on an object is equal to its final kinetic energy. Is this idea true always, sometimes, or never? If it is sometimes true, under what circumstances? If it is always or never true, explain why.
- (a) For what values of the angle θ between two vectors is their scalar product positive? (b) For what values of θ is their scalar product negative?
- Can kinetic energy be negative? Explain.
- Discuss the work done by a pitcher throwing a baseball. What is the approximate distance through which the force acts as the ball is thrown?
- Discuss whether any work is being done by each of the following agents and, if so, whether the work is positive or negative. (a) a chicken scratching the ground (b) a person studying (c) a crane lifting a bucket of concrete (d) the gravitational force on the bucket in part (c) (e) the leg muscles of a person in the act of sitting down
- If only one external force acts on a particle, does it necessarily change the particle's (a) kinetic energy? (b) Its velocity?
- Preparing to clean them, you pop all the removable keys off a computer keyboard. Each key has the shape of a tiny box with one side open. By accident, you spill the keys onto the floor. Explain why many more keys land letter-side down than land open-side down.
- You are reshelving books in a library. You lift a book from the floor to the top shelf. The kinetic energy of the book on the floor was zero and the kinetic energy of the book on the top shelf is zero, so no change occurs in the kinetic energy, yet you did some work in lifting the book. Is the work–kinetic energy theorem violated? Explain.
- A certain uniform spring has spring constant k . Now the spring is cut in half. What is the relationship between k and the spring constant k' of each resulting smaller spring? Explain your reasoning.
- What shape would the graph of U versus x have if a particle were in a region of neutral equilibrium?
- Does the kinetic energy of an object depend on the frame of reference in which its motion is measured? Provide an example to prove this point.
- Cite two examples in which a force is exerted on an object without doing any work on the object.

Problems

ENHANCED WebAssign The problems found in this chapter may be assigned online in Enhanced WebAssign

1. straightforward; 2. intermediate;
3. challenging

1. full solution available in the *Student Solutions Manual/Study Guide*

AMT Analysis Model tutorial available in Enhanced WebAssign

GP Guided Problem

M Master It tutorial available in Enhanced WebAssign

W Watch It video solution available in Enhanced WebAssign

Section 7.2 Work Done by a Constant Force

- A shopper in a supermarket pushes a cart with a force of 35.0 N directed at an angle of 25.0° below the horizontal. The force is just sufficient to balance various friction forces, so the cart moves at constant speed. (a) Find the work done by the shopper on the cart as she moves down a 50.0-m-long aisle. (b) The shopper goes down the next aisle, pushing horizontally and maintaining the same speed as before. If the friction force doesn't change, would the shopper's applied force be larger, smaller, or the same? (c) What about the work done on the cart by the shopper?
- A raindrop of mass 3.35×10^{-5} kg falls vertically at **W** constant speed under the influence of gravity and air resistance. Model the drop as a particle. As it falls 100 m, what is the work done on the raindrop (a) by the gravitational force and (b) by air resistance?
- In 1990, Walter Arfeuille of Belgium lifted a 281.5-kg object through a distance of 17.1 cm using only his teeth. (a) How much work was done on the object by Arfeuille in this lift, assuming the object was lifted at constant speed? (b) What total force was exerted on Arfeuille's teeth during the lift?
- The record number of boat lifts, including the boat and its ten crew members, was achieved by Sami Heinenon and Juha Räsänen of Sweden in 2000. They lifted a total mass of 653.2 kg approximately 4 in. off the ground a total of 24 times. Estimate the total work done by the two men on the boat in this record lift, ignoring the negative work done by the men when they lowered the boat back to the ground.

5. A block of mass $m = 2.50$ kg is pushed a distance $d = 2.20$ m along a frictionless, horizontal table by a constant applied force of magnitude $F = 16.0$ N directed at an angle $\theta = 25.0^\circ$ below the horizontal as shown in Figure P7.5. Determine the work done on the block by (a) the applied force, (b) the normal force exerted by the table, (c) the gravitational force, and (d) the net force on the block.

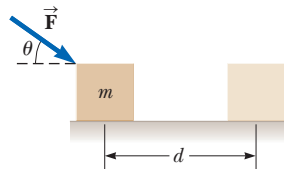


Figure P7.5

6. Spiderman, whose mass is 80.0 kg, is dangling on the free end of a 12.0-m-long rope, the other end of which is fixed to a tree limb above. By repeatedly bending at the waist, he is able to get the rope in motion, eventually getting it to swing enough that he can reach a ledge when the rope makes a 60.0° angle with the vertical. How much work was done by the gravitational force on Spiderman in this maneuver?

Section 7.3 The Scalar Product of Two Vectors

7. For any two vectors \vec{A} and \vec{B} , show that $\vec{A} \cdot \vec{B} = A_x B_x + A_y B_y + A_z B_z$. *Suggestions:* Write \vec{A} and \vec{B} in unit-vector form and use Equations 7.4 and 7.5.
8. Vector \vec{A} has a magnitude of 5.00 units, and vector \vec{B} has a magnitude of 9.00 units. The two vectors make an angle of 50.0° with each other. Find $\vec{A} \cdot \vec{B}$.

Note: In Problems 9 through 12, calculate numerical answers to three significant figures as usual.

9. For $\vec{A} = 3\hat{i} + \hat{j} - \hat{k}$, $\vec{B} = -\hat{i} + 2\hat{j} + 5\hat{k}$, and $\vec{C} = 2\hat{j} - 3\hat{k}$, find $\vec{C} \cdot (\vec{A} - \vec{B})$.
10. Find the scalar product of the vectors in Figure P7.10.

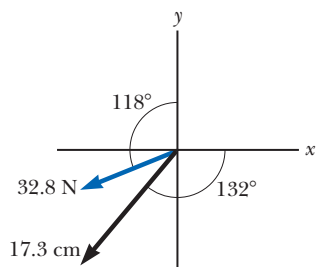


Figure P7.10

11. A force $\vec{F} = (6\hat{i} - 2\hat{j})$ N acts on a particle that undergoes a displacement $\Delta\vec{r} = (3\hat{i} + \hat{j})$ m. Find (a) the work done by the force on the particle and (b) the angle between \vec{F} and $\Delta\vec{r}$.
12. Using the definition of the scalar product, find the angles between (a) $\vec{A} = 3\hat{i} - 2\hat{j}$ and $\vec{B} = 4\hat{i} - 4\hat{j}$, (b) $\vec{A} = -2\hat{i} + 4\hat{j}$ and $\vec{B} = 3\hat{i} - 4\hat{j} + 2\hat{k}$, and (c) $\vec{A} = \hat{i} - 2\hat{j} + 2\hat{k}$ and $\vec{B} = 3\hat{j} + 4\hat{k}$.
13. Let $\vec{B} = 5.00$ m at 60.0° . Let the vector \vec{C} have the same magnitude as \vec{A} and a direction angle greater than that of \vec{A} by 25.0° . Let $\vec{A} \cdot \vec{B} = 30.0$ m² and $\vec{B} \cdot \vec{C} = 35.0$ m². Find the magnitude and direction of \vec{A} .

Section 7.4 Work Done by a Varying Force

14. The force acting on a particle varies as shown in Figure P7.14. Find the work done by the force on the particle as it moves (a) from $x = 0$ to $x = 8.00$ m, (b) from $x = 8.00$ m to $x = 10.0$ m, and (c) from $x = 0$ to $x = 10.0$ m.

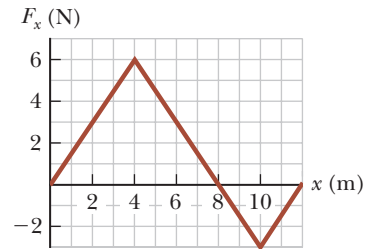


Figure P7.14

15. A particle is subject to a force F_x that varies with position as shown in Figure P7.15. Find the work done by the force on the particle as it moves (a) from $x = 0$ to $x = 5.00$ m, (b) from $x = 5.00$ m to $x = 10.0$ m, and (c) from $x = 10.0$ m to $x = 15.0$ m. (d) What is the total work done by the force over the distance $x = 0$ to $x = 15.0$ m?

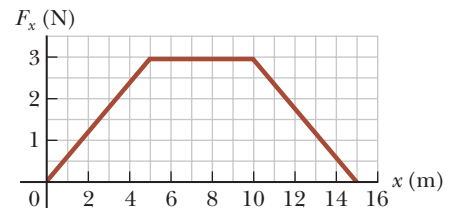


Figure P7.15 Problems 15 and 34.

16. In a control system, an accelerometer consists of a 4.70-g object sliding on a calibrated horizontal rail. A low-mass spring attaches the object to a flange at one end of the rail. Grease on the rail makes static friction negligible, but rapidly damps out vibrations of the sliding object. When subject to a steady acceleration of 0.800g, the object should be at a location 0.500 cm away from its equilibrium position. Find the force constant of the spring required for the calibration to be correct.
17. When a 4.00-kg object is hung vertically on a certain light spring that obeys Hooke's law, the spring stretches 2.50 cm. If the 4.00-kg object is removed, (a) how far will the spring stretch if a 1.50-kg block is hung on it? (b) How much work must an external agent do to stretch the same spring 4.00 cm from its unstretched position?
18. Hooke's law describes a certain light spring of unstretched length 35.0 cm. When one end is attached to the top of a doorframe and a 7.50-kg object is hung from the other end, the length of the spring is 41.5 cm. (a) Find its spring constant. (b) The load and the spring are taken down. Two people pull in opposite directions on the ends of the spring, each with a force of 190 N. Find the length of the spring in this situation.
19. An archer pulls her bowstring back 0.400 m by exerting a force that increases uniformly from zero to 230 N. (a) What is the equivalent spring constant of the bow?

- (b) How much work does the archer do on the string in drawing the bow?
20. A light spring with spring constant 1 200 N/m is hung from an elevated support. From its lower end hangs a second light spring, which has spring constant 1 800 N/m. An object of mass 1.50 kg is hung at rest from the lower end of the second spring. (a) Find the total extension distance of the pair of springs. (b) Find the effective spring constant of the pair of springs as a system. We describe these springs as *in series*.
21. A light spring with spring constant k_1 is hung from an elevated support. From its lower end a second light spring is hung, which has spring constant k_2 . An object of mass m is hung at rest from the lower end of the second spring. (a) Find the total extension distance of the pair of springs. (b) Find the effective spring constant of the pair of springs as a system.
22. Express the units of the force constant of a spring in SI fundamental units.
23. A cafeteria tray dispenser supports a stack of trays on a shelf that hangs from four identical spiral springs under tension, one near each corner of the shelf. Each tray is rectangular, 45.3 cm by 35.6 cm, 0.450 cm thick, and with mass 580 g. (a) Demonstrate that the top tray in the stack can always be at the same height above the floor, however many trays are in the dispenser. (b) Find the spring constant each spring should have for the dispenser to function in this convenient way. (c) Is any piece of data unnecessary for this determination?
24. A light spring with force constant 3.85 N/m is compressed by 8.00 cm as it is held between a 0.250-kg block on the left and a 0.500-kg block on the right, both resting on a horizontal surface. The spring exerts a force on each block, tending to push the blocks apart. The blocks are simultaneously released from rest. Find the acceleration with which each block starts to move, given that the coefficient of kinetic friction between each block and the surface is (a) 0, (b) 0.100, and (c) 0.462.
25. A small particle of mass m is pulled to the top of a frictionless half-cylinder (of radius R) by a light cord that passes over the top of the cylinder as illustrated in Figure P7.25. (a) Assuming the particle moves at a constant speed, show that $F = mg \cos \theta$. *Note:* If the particle moves at constant speed, the component of its acceleration tangent to the cylinder must be zero at all times. (b) By directly integrating $W = \int \vec{F} \cdot d\vec{r}$, find the work done in moving the particle at constant speed from the bottom to the top of the half-cylinder.

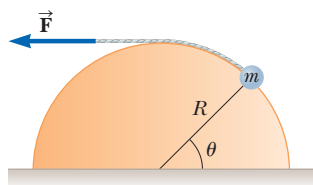


Figure P7.25

26. The force acting on a particle is $F_x = (8x - 16)$, where F is in newtons and x is in meters. (a) Make a plot of this force versus x from $x = 0$ to $x = 3.00$ m. (b) From your graph, find the net work done by this force on the particle as it moves from $x = 0$ to $x = 3.00$ m.

27. When different loads hang on a spring, the spring stretches to different lengths as shown in the following table. (a) Make a graph of the applied force versus the extension of the spring. (b) By least-squares fitting, determine the straight line that best fits the data. (c) To complete part (b), do you want to use all the data points, or should you ignore some of them? Explain. (d) From the slope of the best-fit line, find the spring constant k . (e) If the spring is extended to 105 mm, what force does it exert on the suspended object?

F (N)	2.0	4.0	6.0	8.0	10	12	14	16	18	20	22
L (mm)	15	32	49	64	79	98	112	126	149	175	190

28. A 100-g bullet is fired from a rifle having a barrel 0.600 m long. Choose the origin to be at the location where the bullet begins to move. Then the force (in newtons) exerted by the expanding gas on the bullet is $15\,000 + 10\,000x - 25\,000x^2$, where x is in meters. (a) Determine the work done by the gas on the bullet as the bullet travels the length of the barrel. (b) **What If?** If the barrel is 1.00 m long, how much work is done, and (c) how does this value compare with the work calculated in part (a)?
29. A force $\vec{F} = (4x\hat{i} + 3y\hat{j})$, where \vec{F} is in newtons and x and y are in meters, acts on an object as the object moves in the x direction from the origin to $x = 5.00$ m. Find the work $W = \int \vec{F} \cdot d\vec{r}$ done by the force on the object.
30. **Review.** The graph in Figure P7.30 specifies a functional relationship between the two variables u and v . (a) Find $\int_a^b u dv$. (b) Find $\int_b^a u dv$. (c) Find $\int_a^b v du$.

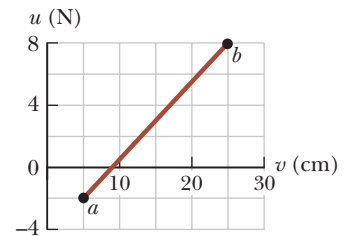


Figure P7.30

Section 7.5 Kinetic Energy and the Work–Kinetic Energy Theorem

31. A 3.00-kg object has a velocity $(6.00\hat{i} - 2.00\hat{j})$ m/s. (a) What is its kinetic energy at this moment? (b) What is the net work done on the object if its velocity changes to $(8.00\hat{i} + 4.00\hat{j})$ m/s? (*Note:* From the definition of the dot product, $v^2 = \vec{v} \cdot \vec{v}$.)
32. A worker pushing a 35.0-kg wooden crate at a constant speed for 12.0 m along a wood floor does 350 J of work by applying a constant horizontal force of magnitude F on the crate. (a) Determine the value of F . (b) If the worker now applies a force greater than F , describe the subsequent motion of the crate. (c) Describe what would happen to the crate if the applied force is less than F .
33. A 0.600-kg particle has a speed of 2.00 m/s at point **A** and kinetic energy of 7.50 J at point **B**. What is (a) its kinetic energy at **A**, (b) its speed at **B**, and (c) the net work done on the particle by external forces as it moves from **A** to **B**?

34. A 4.00-kg particle is subject to a net force that varies with position as shown in Figure P7.15. The particle starts from rest at $x = 0$. What is its speed at (a) $x = 5.00$ m, (b) $x = 10.0$ m, and (c) $x = 15.0$ m?

35. A 2 100-kg pile driver is used to drive a steel I-beam into the ground. The pile driver falls 5.00 m before coming into contact with the top of the beam, and it drives the beam 12.0 cm farther into the ground before coming to rest. Using energy considerations, calculate the average force the beam exerts on the pile driver while the pile driver is brought to rest.

36. **Review.** In an electron microscope, there is an electron gun that contains two charged metallic plates 2.80 cm apart. An electric force accelerates each electron in the beam from rest to 9.60% of the speed of light over this distance. (a) Determine the kinetic energy of the electron as it leaves the electron gun. Electrons carry this energy to a phosphorescent viewing screen where the microscope's image is formed, making it glow. For an electron passing between the plates in the electron gun, determine (b) the magnitude of the constant electric force acting on the electron, (c) the acceleration of the electron, and (d) the time interval the electron spends between the plates.

37. **Review.** You can think of the work–kinetic energy theorem as a second theory of motion, parallel to Newton's laws in describing how outside influences affect the motion of an object. In this problem, solve parts (a), (b), and (c) separately from parts (d) and (e) so you can compare the predictions of the two theories. A 15.0-g bullet is accelerated from rest to a speed of 780 m/s in a rifle barrel of length 72.0 cm. (a) Find the kinetic energy of the bullet as it leaves the barrel. (b) Use the work–kinetic energy theorem to find the net work that is done on the bullet. (c) Use your result to part (b) to find the magnitude of the average net force that acted on the bullet while it was in the barrel. (d) Now model the bullet as a particle under constant acceleration. Find the constant acceleration of a bullet that starts from rest and gains a speed of 780 m/s over a distance of 72.0 cm. (e) Modeling the bullet as a particle under a net force, find the net force that acted on it during its acceleration. (f) What conclusion can you draw from comparing your results of parts (c) and (e)?

38. **Review.** A 7.80-g bullet moving at 575 m/s strikes the hand of a superhero, causing the hand to move 5.50 cm in the direction of the bullet's velocity before stopping. (a) Use work and energy considerations to find the average force that stops the bullet. (b) Assuming the force is constant, determine how much time elapses between the moment the bullet strikes the hand and the moment it stops moving.

39. **Review.** A 5.75-kg object passes through the origin at time $t = 0$ such that its x component of velocity is 5.00 m/s and its y component of velocity is -3.00 m/s. (a) What is the kinetic energy of the object at this time? (b) At a later time $t = 2.00$ s, the particle is located at $x = 8.50$ m and $y = 5.00$ m. What constant force acted

on the object during this time interval? (c) What is the speed of the particle at $t = 2.00$ s?

Section 7.6 Potential Energy of a System

40. A 1 000-kg roller coaster car is initially at the top of a rise, at point **A**. It then moves 135 ft, at an angle of 40.0° below the horizontal, to a lower point **B**. (a) Choose the car at point **B** to be the zero configuration for gravitational potential energy of the roller coaster–Earth system. Find the potential energy of the system when the car is at points **A** and **B**, and the change in potential energy as the car moves between these points. (b) Repeat part (a), setting the zero configuration with the car at point **A**.

41. A 0.20-kg stone is held 1.3 m above the top edge of a water well and then dropped into it. The well has a depth of 5.0 m. Relative to the configuration with the stone at the top edge of the well, what is the gravitational potential energy of the stone–Earth system (a) before the stone is released and (b) when it reaches the bottom of the well? (c) What is the change in gravitational potential energy of the system from release to reaching the bottom of the well?

42. A 400-N child is in a swing that is attached to a pair of ropes 2.00 m long. Find the gravitational potential energy of the child–Earth system relative to the child's lowest position when (a) the ropes are horizontal, (b) the ropes make a 30.0° angle with the vertical, and (c) the child is at the bottom of the circular arc.

Section 7.7 Conservative and Nonconservative Forces

43. A 4.00-kg particle moves from the origin to position **C**, having coordinates $x = 5.00$ m and $y = 5.00$ m (Fig. P7.43). One force on the particle is the gravitational force acting in the negative y direction. Using Equation 7.3, calculate the work done by the gravitational force on the particle as it goes from O to **C** along (a) the purple path, (b) the red path, and (c) the blue path. (d) Your results should all be identical. Why?

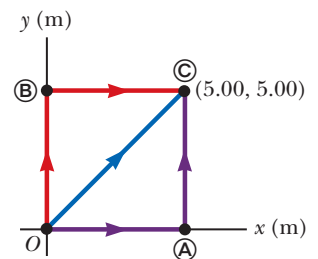


Figure P7.43

Problems 43 through 46.

44. (a) Suppose a constant force acts on an object. The force does not vary with time or with the position or the velocity of the object. Start with the general definition for work done by a force

$$W = \int_i^f \vec{\mathbf{F}} \cdot d\vec{\mathbf{r}}$$

and show that the force is conservative. (b) As a special case, suppose the force $\vec{\mathbf{F}} = (3\hat{\mathbf{i}} + 4\hat{\mathbf{j}})$ N acts on a particle that moves from O to **C** in Figure P7.43. Calculate the work done by $\vec{\mathbf{F}}$ on the particle as it moves along each one of the three paths shown in the figure

and show that the work done along the three paths is identical.

45. A force acting on a particle moving in the xy plane is given by $\vec{F} = (2y\hat{i} + x^2\hat{j})$, where \vec{F} is in newtons and x and y are in meters. The particle moves from the origin to a final position having coordinates $x = 5.00$ m and $y = 5.00$ m as shown in Figure P7.43. Calculate the work done by \vec{F} on the particle as it moves along (a) the purple path, (b) the red path, and (c) the blue path. (d) Is \vec{F} conservative or nonconservative? (e) Explain your answer to part (d).

46. An object moves in the xy plane in Figure P7.43 and experiences a friction force with constant magnitude 3.00 N, always acting in the direction opposite the object's velocity. Calculate the work that you must do to slide the object at constant speed against the friction force as the object moves along (a) the purple path O to \textcircled{A} followed by a return purple path to O , (b) the purple path O to \textcircled{C} followed by a return blue path to O , and (c) the blue path O to \textcircled{C} followed by a return blue path to O . (d) Each of your three answers should be nonzero. What is the significance of this observation?

Section 7.8 Relationship Between Conservative Forces and Potential Energy

47. The potential energy of a system of two particles separated by a distance r is given by $U(r) = A/r$, where A is a constant. Find the radial force \vec{F}_r that each particle exerts on the other.

48. Why is the following situation impossible? A librarian lifts a book from the ground to a high shelf, doing 20.0 J of work in the lifting process. As he turns his back, the book falls off the shelf back to the ground. The gravitational force from the Earth on the book does 20.0 J of work on the book while it falls. Because the work done was 20.0 J + 20.0 J = 40.0 J, the book hits the ground with 40.0 J of kinetic energy.

49. A potential energy function for a system in which a two-dimensional force acts is of the form $U = 3x^3y - 7x$. Find the force that acts at the point (x, y) .

50. A single conservative force acting on a particle within a system varies as $\vec{F} = (-Ax + Bx^2)\hat{i}$, where A and B are constants, \vec{F} is in newtons, and x is in meters. (a) Calculate the potential energy function $U(x)$ associated with this force for the system, taking $U = 0$ at $x = 0$. Find (b) the change in potential energy and (c) the change in kinetic energy of the system as the particle moves from $x = 2.00$ m to $x = 3.00$ m.

51. A single conservative force acts on a 5.00-kg particle within a system due to its interaction with the rest of the system. The equation $F_x = 2x + 4$ describes the force, where F_x is in newtons and x is in meters. As the particle moves along the x axis from $x = 1.00$ m to $x = 5.00$ m, calculate (a) the work done by this force on the particle, (b) the change in the potential energy of the system, and (c) the kinetic energy the particle has at $x = 5.00$ m if its speed is 3.00 m/s at $x = 1.00$ m.

Section 7.9 Energy Diagrams and Equilibrium of a System

52. For the potential energy curve shown in Figure P7.52, (a) determine whether the force F_x is positive, negative, or zero at the five points indicated. (b) Indicate points of stable, unstable, and neutral equilibrium. (c) Sketch the curve for F_x versus x from $x = 0$ to $x = 9.5$ m.

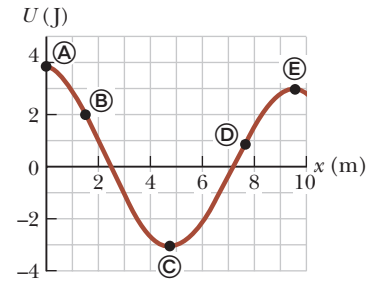


Figure P7.52

53. A right circular cone can theoretically be balanced on a horizontal surface in three different ways. Sketch these three equilibrium configurations and identify them as positions of stable, unstable, or neutral equilibrium.

Additional Problems

54. The potential energy function for a system of particles is given by $U(x) = -x^3 + 2x^2 + 3x$, where x is the position of one particle in the system. (a) Determine the force F_x on the particle as a function of x . (b) For what values of x is the force equal to zero? (c) Plot $U(x)$ versus x and F_x versus x and indicate points of stable and unstable equilibrium.

55. Review. A baseball outfielder throws a 0.150-kg baseball at a speed of 40.0 m/s and an initial angle of 30.0° to the horizontal. What is the kinetic energy of the baseball at the highest point of its trajectory?

56. A particle moves along the x axis from $x = 12.8$ m to $x = 23.7$ m under the influence of a force

$$F = \frac{375}{x^3 + 3.75x}$$

where F is in newtons and x is in meters. Using numerical integration, determine the work done by this force on the particle during this displacement. Your result should be accurate to within 2%.

57. Two identical steel balls, each of diameter 25.4 mm and moving in opposite directions at 5 m/s, run into each other head-on and bounce apart. Prior to the collision, one of the balls is squeezed in a vise while precise measurements are made of the resulting amount of compression. The results show that Hooke's law is a fair model of the ball's elastic behavior. For one datum, a force of 16 kN exerted by each jaw of the vise results in a 0.2-mm reduction in the diameter. The diameter returns to its original value when the force is removed. (a) Modeling the ball as a spring, find its spring constant. (b) Does the interaction of the balls during the collision last only for an instant or for a nonzero time interval? State your evidence. (c) Compute an estimate for the kinetic energy of each of the balls before they collide. (d) Compute an estimate for the maximum amount of compression each ball undergoes when the balls collide. (e) Compute an order-of-magnitude estimate for the time interval for which the balls are in

contact. (In Chapter 15, you will learn to calculate the contact time interval precisely.)

58. When an object is displaced by an amount x from stable equilibrium, a restoring force acts on it, tending to return the object to its equilibrium position. The magnitude of the restoring force can be a complicated function of x . In such cases, we can generally imagine the force function $F(x)$ to be expressed as a power series in x as $F(x) = -(k_1x + k_2x^2 + k_3x^3 + \dots)$. The first term here is just Hooke's law, which describes the force exerted by a simple spring for small displacements. For small excursions from equilibrium, we generally ignore the higher-order terms, but in some cases it may be desirable to keep the second term as well. If we model the restoring force as $F = -(k_1x + k_2x^2)$, how much work is done on an object in displacing it from $x = 0$ to $x = x_{\max}$ by an applied force $-F$?
59. A 6 000-kg freight car rolls along rails with negligible friction. The car is brought to rest by a combination of two coiled springs as illustrated in Figure P7.59. Both springs are described by Hooke's law and have spring constants $k_1 = 1\,600$ N/m and $k_2 = 3\,400$ N/m. After the first spring compresses a distance of 30.0 cm, the second spring acts with the first to increase the force as additional compression occurs as shown in the graph. The car comes to rest 50.0 cm after first contacting the two-spring system. Find the car's initial speed.

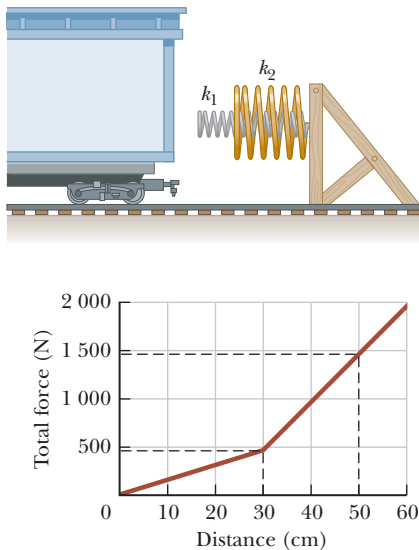


Figure P7.59

60. Why is the following situation impossible? In a new casino, a supersized pinball machine is introduced. Casino advertising boasts that a professional basketball player can lie on top of the machine and his head and feet will not hang off the edge! The ball launcher in the machine sends metal balls up one side of the machine and then into play. The spring in the launcher (Fig. P7.60) has a force constant of 1.20 N/cm. The surface on which the ball moves is inclined $\theta = 10.0^\circ$ with respect to the horizontal. The spring is initially compressed its maximum distance $d = 5.00$ cm. A

ball of mass 100 g is projected into play by releasing the plunger. Casino visitors find the play of the giant machine quite exciting.

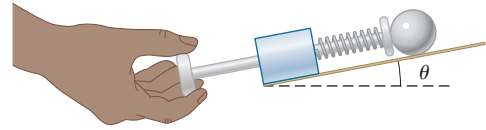


Figure P7.60

61. **Review.** Two constant forces act on an object of mass $m = 5.00$ kg moving in the xy plane as shown in Figure P7.61. Force \vec{F}_1 is 25.0 N at 35.0° , and force \vec{F}_2 is 42.0 N at 150° . At time $t = 0$, the object is at the origin and has velocity $(4.00\hat{i} + 2.50\hat{j})$ m/s. (a) Express the two forces in unit-vector notation. Use unit-vector notation for your other answers. (b) Find the total force exerted on the object. (c) Find the object's acceleration. Now, considering the instant $t = 3.00$ s, find (d) the object's velocity, (e) its position, (f) its kinetic energy from $\frac{1}{2}mv_f^2$, and (g) its kinetic energy from $\frac{1}{2}mv_i^2 + \sum \vec{F} \cdot \Delta\vec{r}$. (h) What conclusion can you draw by comparing the answers to parts (f) and (g)?

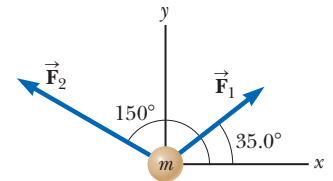


Figure P7.61

62. The spring constant of an automotive suspension spring increases with increasing load due to a spring coil that is widest at the bottom, smoothly tapering to a smaller diameter near the top. The result is a softer ride on normal road surfaces from the wider coils, but the car does not bottom out on bumps because when the lower coils collapse, the stiffer coils near the top absorb the load. For such springs, the force exerted by the spring can be empirically found to be given by $F = ax^b$. For a tapered spiral spring that compresses 12.9 cm with a 1 000-N load and 31.5 cm with a 5 000-N load, (a) evaluate the constants a and b in the empirical equation for F and (b) find the work needed to compress the spring 25.0 cm.

63. An inclined plane of angle $\theta = 20.0^\circ$ has a spring of force constant $k = 500$ N/m fastened securely at the bottom so that the spring is parallel to the surface as shown in Figure P7.63. A block of mass $m = 2.50$ kg is placed on the plane at a distance $d = 0.300$ m from the spring. From this position, the block is projected downward toward the spring with speed $v = 0.750$ m/s. By what distance is the spring compressed when the block momentarily comes to rest?

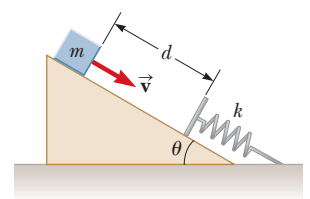


Figure P7.63

Problems 63 and 64.

64. An inclined plane of angle θ has a spring of force constant k fastened securely at the bottom so that the

spring is parallel to the surface. A block of mass m is placed on the plane at a distance d from the spring. From this position, the block is projected downward toward the spring with speed v as shown in Figure P7.63. By what distance is the spring compressed when the block momentarily comes to rest?

65. (a) Take $U = 5$ for a system with a particle at position $x = 0$ and calculate the potential energy of the system as a function of the particle position x . The force on the particle is given by $(8e^{-2x})\hat{i}$. (b) Explain whether the force is conservative or nonconservative and how you can tell.

Challenge Problems

66. A particle of mass $m = 1.18$ kg is attached between two identical springs on a frictionless, horizontal tabletop. Both springs have spring constant k and are initially unstressed, and the particle is at $x = 0$. (a) The particle is pulled a distance x along a direction perpendicular to the initial configuration of the springs as shown in Figure P7.66. Show that the force exerted by the springs on the particle is

$$\vec{F} = -2kx\left(1 - \frac{L}{\sqrt{x^2 + L^2}}\right)\hat{i}$$

- (b) Show that the potential energy of the system is

$$U(x) = kx^2 + 2kL(L - \sqrt{x^2 + L^2})$$

- (c) Make a plot of $U(x)$ versus x and identify all equilibrium points. Assume $L = 1.20$ m and $k = 40.0$ N/m. (d) If the particle is pulled 0.500 m to the right and then released, what is its speed when it reaches $x = 0$?

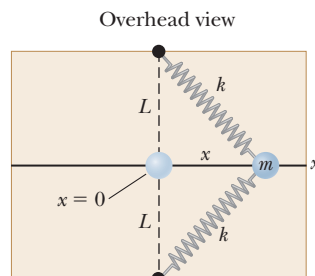


Figure P7.66

67. **Review.** A light spring has unstressed length 15.5 cm. It is described by Hooke's law with spring constant 4.30 N/m. One end of the horizontal spring is held on a fixed vertical axle, and the other end is attached to a puck of mass m that can move without friction over a horizontal surface. The puck is set into motion in a circle with a period of 1.30 s. (a) Find the extension of the spring x as it depends on m . Evaluate x for (b) $m = 0.070$ kg, (c) $m = 0.140$ kg, (d) $m = 0.180$ kg, and (e) $m = 0.190$ kg. (f) Describe the pattern of variation of x as it depends on m .

Conservation of Energy

CHAPTER

8



- 8.1 Analysis Model: Nonisolated System (Energy)
- 8.2 Analysis Model: Isolated System (Energy)
- 8.3 Situations Involving Kinetic Friction
- 8.4 Changes in Mechanical Energy for Nonconservative Forces
- 8.5 Power

In Chapter 7, we introduced three methods for storing energy in a system: kinetic energy, associated with movement of members of the system; potential energy, determined by the configuration of the system; and internal energy, which is related to the temperature of the system.

We now consider analyzing physical situations using the energy approach for two types of systems: *nonisolated* and *isolated* systems. For nonisolated systems, we shall investigate ways that energy can cross the boundary of the system, resulting in a change in the system's total energy. This analysis leads to a critically important principle called *conservation of energy*. The conservation of energy principle extends well beyond physics and can be applied to biological organisms, technological systems, and engineering situations.

In isolated systems, energy does not cross the boundary of the system. For these systems, the total energy of the system is constant. If no nonconservative forces act within the system, we can use *conservation of mechanical energy* to solve a variety of problems.

Three youngsters enjoy the transformation of potential energy to kinetic energy on a waterslide. We can analyze processes such as these with the techniques developed in this chapter.

(Jade Lee/Asia Images/Getty Images)

Situations involving the transformation of mechanical energy to internal energy due to nonconservative forces require special handling. We investigate the procedures for these types of problems.

Finally, we recognize that energy can cross the boundary of a system at different rates. We describe the rate of energy transfer with the quantity *power*.

8.1 Analysis Model: Nonisolated System (Energy)

As we have seen, an object, modeled as a particle, can be acted on by various forces, resulting in a change in its kinetic energy according to the work–kinetic energy theorem from Chapter 7. If we choose the object as the system, this very simple situation is the first example of a *nonisolated system*, for which energy crosses the boundary of the system during some time interval due to an interaction with the environment. This scenario is common in physics problems. If a system does not interact with its environment, it is an *isolated system*, which we will study in Section 8.2.

The work–kinetic energy theorem is our first example of an energy equation appropriate for a nonisolated system. In the case of that theorem, the interaction of the system with its environment is the work done by the external force, and the quantity in the system that changes is the kinetic energy.

So far, we have seen only one way to transfer energy into a system: work. We mention below a few other ways to transfer energy into or out of a system. The details of these processes will be studied in other sections of the book. We illustrate mechanisms to transfer energy in Figure 8.1 and summarize them as follows.

Work, as we have learned in Chapter 7, is a method of transferring energy to a system by applying a force to the system such that the point of application of the force undergoes a displacement (Fig. 8.1a).

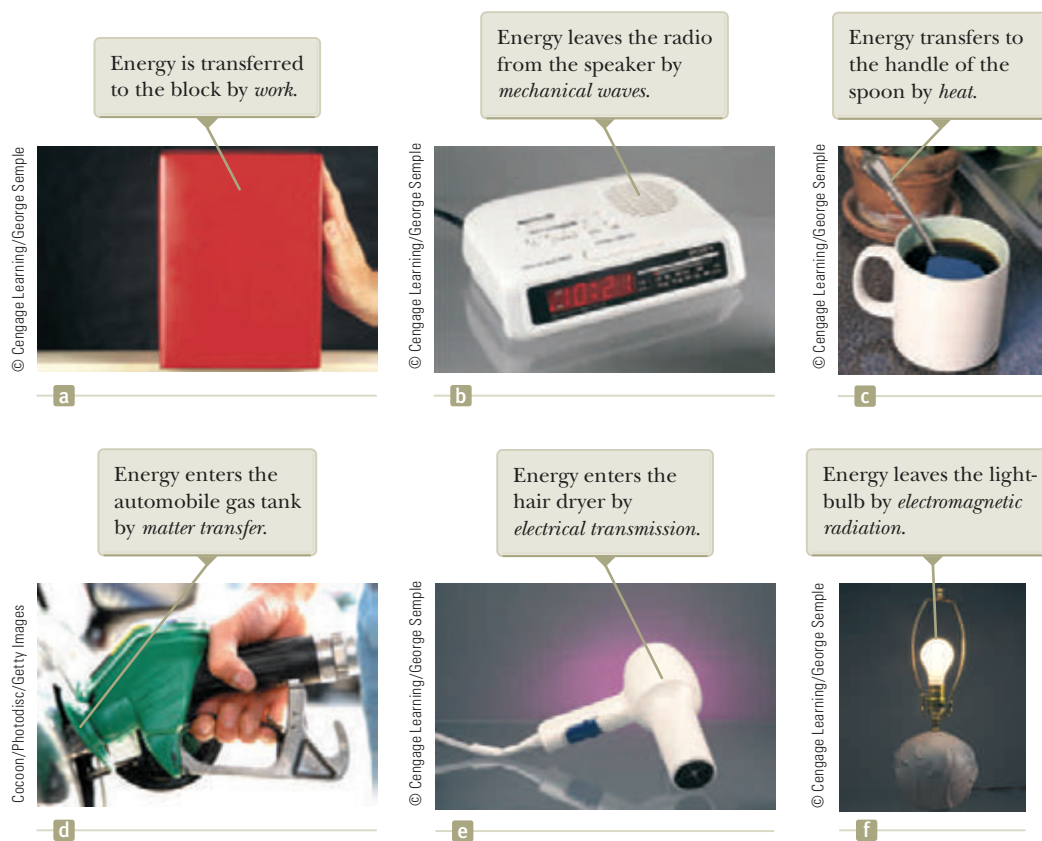


Figure 8.1 Energy transfer mechanisms. In each case, the system into which or from which energy is transferred is indicated.

Mechanical waves (Chapters 16–18) are a means of transferring energy by allowing a disturbance to propagate through air or another medium. It is the method by which energy (which you detect as sound) leaves the system of your clock radio through the loudspeaker and enters your ears to stimulate the hearing process (Fig. 8.1b). Other examples of mechanical waves are seismic waves and ocean waves.

Heat (Chapter 20) is a mechanism of energy transfer that is driven by a temperature difference between a system and its environment. For example, imagine dividing a metal spoon into two parts: the handle, which we identify as the system, and the portion submerged in a cup of coffee, which is part of the environment (Fig. 8.1c). The handle of the spoon becomes hot because fast-moving electrons and atoms in the submerged portion bump into slower ones in the nearby part of the handle. These particles move faster because of the collisions and bump into the next group of slow particles. Therefore, the internal energy of the spoon handle rises from energy transfer due to this collision process.

Matter transfer (Chapter 20) involves situations in which matter physically crosses the boundary of a system, carrying energy with it. Examples include filling your automobile tank with gasoline (Fig. 8.1d) and carrying energy to the rooms of your home by circulating warm air from the furnace, a process called *convection*.

Electrical transmission (Chapters 27 and 28) involves energy transfer into or out of a system by means of electric currents. It is how energy transfers into your hair dryer (Fig. 8.1e), home theater system, or any other electrical device.

Electromagnetic radiation (Chapter 34) refers to electromagnetic waves such as light (Fig. 8.1f), microwaves, and radio waves crossing the boundary of a system. Examples of this method of transfer include cooking a baked potato in your microwave oven and energy traveling from the Sun to the Earth by light through space.¹

A central feature of the energy approach is the notion that we can neither create nor destroy energy, that energy is always *conserved*. This feature has been tested in countless experiments, and no experiment has ever shown this statement to be incorrect. Therefore, **if the total amount of energy in a system changes, it can only be because energy has crossed the boundary of the system by a transfer mechanism such as one of the methods listed above.**

Energy is one of several quantities in physics that are conserved. We will see other conserved quantities in subsequent chapters. There are many physical quantities that do not obey a conservation principle. For example, there is no conservation of force principle or conservation of velocity principle. Similarly, in areas other than physical quantities, such as in everyday life, some quantities are conserved and some are not. For example, the money in the system of your bank account is a conserved quantity. The only way the account balance changes is if money crosses the boundary of the system by deposits or withdrawals. On the other hand, the number of people in the system of a country is not conserved. Although people indeed cross the boundary of the system, which changes the total population, the population can also change by people dying and by giving birth to new babies. Even if no people cross the system boundary, the births and deaths will change the number of people in the system. There is no equivalent in the concept of energy to dying or giving birth. The general statement of the principle of **conservation of energy** can be described mathematically with the **conservation of energy equation** as follows:

$$\Delta E_{\text{system}} = \sum T \quad (8.1)$$

where E_{system} is the total energy of the system, including all methods of energy storage (kinetic, potential, and internal), and T (for *transfer*) is the amount of energy transferred across the system boundary by some mechanism. Two of our transfer mechanisms have well-established symbolic notations. For work, $T_{\text{work}} = W$ as discussed in Chapter 7, and for heat, $T_{\text{heat}} = Q$ as defined in Chapter 20. (Now that we

Pitfall Prevention 8.1

Heat Is Not a Form of Energy

The word *heat* is one of the most misused words in our popular language. Heat is a method of *transferring* energy, *not* a form of storing energy. Therefore, phrases such as “heat content,” “the heat of the summer,” and “the heat escaped” all represent uses of this word that are inconsistent with our physics definition. See Chapter 20.

◀ Conservation of energy

¹Electromagnetic radiation and work done by field forces are the only energy transfer mechanisms that do not require molecules of the environment to be available at the system boundary. Therefore, systems surrounded by a vacuum (such as planets) can only exchange energy with the environment by means of these two possibilities.

are familiar with work, we can simplify the appearance of equations by letting the simple symbol W represent the external work W_{ext} on a system. For internal work, we will *always* use W_{int} to differentiate it from W .) The other four members of our list do not have established symbols, so we will call them T_{MW} (mechanical waves), T_{MT} (matter transfer), T_{ET} (electrical transmission), and T_{ER} (electromagnetic radiation).

The full expansion of Equation 8.1 is

$$\Delta K + \Delta U + \Delta E_{\text{int}} = W + Q + T_{\text{MW}} + T_{\text{MT}} + T_{\text{ET}} + T_{\text{ER}} \quad (8.2)$$

which is the primary mathematical representation of the energy version of the analysis model of the **nonisolated system**. (We will see other versions of the nonisolated system model, involving linear momentum and angular momentum, in later chapters.) In most cases, Equation 8.2 reduces to a much simpler one because some of the terms are zero for the specific situation. If, for a given system, all terms on the right side of the conservation of energy equation are zero, the system is an *isolated system*, which we study in the next section.

The conservation of energy equation is no more complicated in theory than the process of balancing your checking account statement. If your account is the system, the change in the account balance for a given month is the sum of all the transfers: deposits, withdrawals, fees, interest, and checks written. You may find it useful to think of energy as the *currency of nature!*

Suppose a force is applied to a nonisolated system and the point of application of the force moves through a displacement. Then suppose the only effect on the system is to change its speed. In this case, the only transfer mechanism is work (so that the right side of Eq. 8.2 reduces to just W) and the only kind of energy in the system that changes is the kinetic energy (so that the left side of Eq. 8.2 reduces to just ΔK). Equation 8.2 then becomes

$$\Delta K = W$$

which is the work–kinetic energy theorem. This theorem is a special case of the more general principle of conservation of energy. We shall see several more special cases in future chapters.

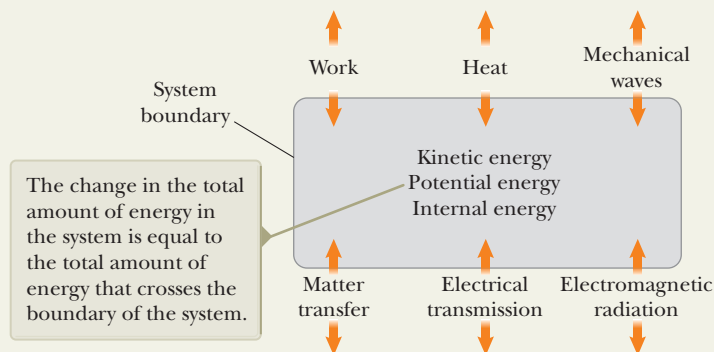
Quick Quiz 8.1 By what transfer mechanisms does energy enter and leave (a) your television set? (b) Your gasoline-powered lawn mower? (c) Your hand-cranked pencil sharpener?

Quick Quiz 8.2 Consider a block sliding over a horizontal surface with friction. Ignore any sound the sliding might make. (i) If the system is the *block*, this system is (a) isolated (b) nonisolated (c) impossible to determine (ii) If the system is the *surface*, describe the system from the same set of choices. (iii) If the system is the *block and the surface*, describe the system from the same set of choices.

Analysis Model Nonisolated System (Energy)

Imagine you have identified a system to be analyzed and have defined a system boundary. Energy can exist in the system in three forms: kinetic, potential, and internal. The total of that energy can be changed when energy crosses the system boundary by any of six transfer methods shown in the diagram here. The total change in the energy in the system is equal to the total amount of energy that has crossed the system boundary. The mathematical statement of that concept is expressed in the **conservation of energy equation**:

$$\Delta E_{\text{system}} = \Sigma T \quad (8.1)$$



Analysis Model

Nonisolated System (Energy) (continued)

The full expansion of Equation 8.1 shows the specific types of energy storage and transfer:

$$\Delta K + \Delta U + \Delta E_{\text{int}} = W + Q + T_{\text{MW}} + T_{\text{MT}} + T_{\text{ET}} + T_{\text{ER}} \quad (8.2)$$

For a specific problem, this equation is generally reduced to a smaller number of terms by eliminating the terms that are equal to zero because they are not appropriate to the situation.

Examples:

- a force does work on a system of a single object, changing its speed: the work–kinetic energy theorem, $W = \Delta K$
- a gas contained in a vessel has work done on it and experiences a transfer of energy by heat, resulting in a change in its temperature: the first law of thermodynamics, $\Delta E_{\text{int}} = W + Q$ (Chapter 20)
- an incandescent light bulb is turned on, with energy entering the filament by electricity, causing its temperature to increase, and leaving by light: $\Delta E_{\text{int}} = T_{\text{ET}} + T_{\text{ER}}$ (Chapter 27)
- a photon enters a metal, causing an electron to be ejected from the metal: the photoelectric effect, $\Delta K + \Delta U = T_{\text{ER}}$ (Chapter 40)

8.2 Analysis Model: Isolated System (Energy)

In this section, we study another very common scenario in physics problems: a system is chosen such that no energy crosses the system boundary by any method. We begin by considering a gravitational situation. Think about the book–Earth system in Figure 7.15 in the preceding chapter. After we have lifted the book, there is gravitational potential energy stored in the system, which can be calculated from the work done by the external agent on the system, using $W = \Delta U_g$. (Check to see that this equation, which we’ve seen before, is contained within Eq. 8.2 above.)

Let us now shift our focus to the work done *on the book alone* by the gravitational force (Fig. 8.2) as the book falls back to its original height. As the book falls from y_i to y_f , the work done by the gravitational force on the book is

$$W_{\text{on book}} = (m\vec{g}) \cdot \Delta\vec{r} = (-mg\hat{j}) \cdot [(y_f - y_i)\hat{j}] = mgy_i - mgy_f \quad (8.3)$$

From the work–kinetic energy theorem of Chapter 7, the work done on the book is equal to the change in the kinetic energy of the book:

$$W_{\text{on book}} = \Delta K_{\text{book}}$$

We can equate these two expressions for the work done on the book:

$$\Delta K_{\text{book}} = mgy_i - mgy_f \quad (8.4)$$

Let us now relate each side of this equation to the *system* of the book and the Earth. For the right-hand side,

$$mgy_i - mgy_f = -(mgy_f - mgy_i) = -\Delta U_g$$

where $U_g = mgy$ is the gravitational potential energy of the system. For the left-hand side of Equation 8.4, because the book is the only part of the system that is moving, we see that $\Delta K_{\text{book}} = \Delta K$, where K is the kinetic energy of the system. Therefore, with each side of Equation 8.4 replaced with its system equivalent, the equation becomes

$$\Delta K = -\Delta U_g \quad (8.5)$$

This equation can be manipulated to provide a very important general result for solving problems. First, we move the change in potential energy to the left side of the equation:

$$\Delta K + \Delta U_g = 0$$

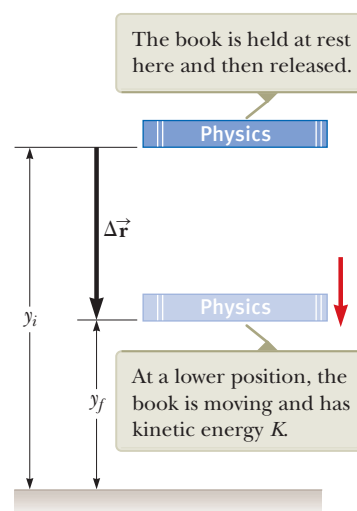


Figure 8.2 A book is released from rest and falls due to work done by the gravitational force on the book.

Pitfall Prevention 8.2

Conditions on Equation 8.6 Equation 8.6 is only true for a system in which conservative forces act. We will see how to handle nonconservative forces in Sections 8.3 and 8.4.

Mechanical energy of a system ▶

The mechanical energy of an isolated system with no nonconservative forces acting is conserved. ▶

The left side represents a sum of changes of the energy stored in the system. The right-hand side is zero because there are no transfers of energy across the boundary of the system; the book–Earth system is *isolated* from the environment. We developed this equation for a gravitational system, but it can be shown to be valid for a system with any type of potential energy. Therefore, for an isolated system,

$$\Delta K + \Delta U = 0 \quad (8.6)$$

(Check to see that this equation is contained within Eq. 8.2.)

We defined in Chapter 7 the sum of the kinetic and potential energies of a system as its mechanical energy:

$$E_{\text{mech}} \equiv K + U \quad (8.7)$$

where U represents the total of *all* types of potential energy. Because the system under consideration is isolated, Equations 8.6 and 8.7 tell us that the mechanical energy of the system is conserved:

$$\Delta E_{\text{mech}} = 0 \quad (8.8)$$

Equation 8.8 is a statement of **conservation of mechanical energy** for an isolated system with no nonconservative forces acting. The mechanical energy in such a system is conserved: the sum of the kinetic and potential energies remains constant:

Let us now write the changes in energy in Equation 8.6 explicitly:

$$\begin{aligned} (K_f - K_i) + (U_f - U_i) &= 0 \\ K_f + U_f &= K_i + U_i \end{aligned} \quad (8.9)$$

For the gravitational situation of the falling book, Equation 8.9 can be written as

$$\frac{1}{2}mv_f^2 + mgy_f = \frac{1}{2}mv_i^2 + mgy_i$$

As the book falls to the Earth, the book–Earth system loses potential energy and gains kinetic energy such that the total of the two types of energy always remains constant: $E_{\text{total},i} = E_{\text{total},f}$.

If there are nonconservative forces acting within the system, mechanical energy is transformed to internal energy as discussed in Section 7.7. If nonconservative forces act in an isolated system, the total energy of the system is conserved although the mechanical energy is not. In that case, we can express the conservation of energy of the system as

$$\Delta E_{\text{system}} = 0 \quad (8.10)$$

where E_{system} includes all kinetic, potential, and internal energies. This equation is the most general statement of the energy version of the **isolated system** model. It is equivalent to Equation 8.2 with all terms on the right-hand side equal to zero.

Quick Quiz 8.3 A rock of mass m is dropped to the ground from a height h . A second rock, with mass $2m$, is dropped from the same height. When the second rock strikes the ground, what is its kinetic energy? (a) twice that of the first rock (b) four times that of the first rock (c) the same as that of the first rock (d) half as much as that of the first rock (e) impossible to determine

Quick Quiz 8.4 Three identical balls are thrown from the top of a building, all with the same initial speed. As shown in Figure 8.3, the first is thrown horizontally, the second at some angle above the horizontal, and the third at some angle below the horizontal. Neglecting air resistance, rank the speeds of the balls at the instant each hits the ground.

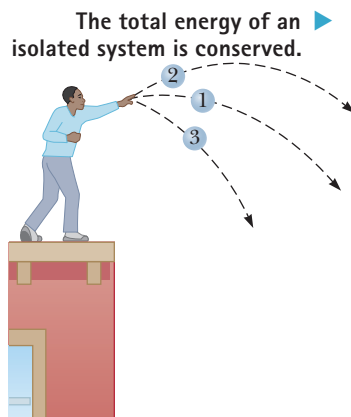
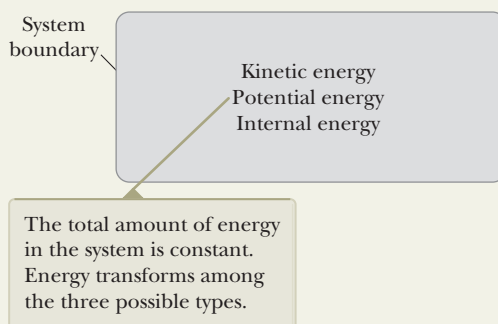


Figure 8.3 (Quick Quiz 8.4) Three identical balls are thrown with the same initial speed from the top of a building.

Analysis Model Isolated System (Energy)

Imagine you have identified a system to be analyzed and have defined a system boundary. Energy can exist in the system in three forms: kinetic, potential, and internal. Imagine also a situation in which no energy crosses the boundary of the system by any method. Then, the system is isolated; energy transforms from one form to another and Equation 8.2 becomes



$$\Delta E_{\text{system}} = 0 \quad (8.10)$$

If no nonconservative forces act within the isolated system, the mechanical energy of the system is conserved, so

$$\Delta E_{\text{mech}} = 0 \quad (8.8)$$

Examples:

- an object is in free-fall; gravitational potential energy transforms to kinetic energy: $\Delta K + \Delta U = 0$
- a basketball rolling across a gym floor comes to rest; kinetic energy transforms to internal energy: $\Delta K + \Delta E_{\text{int}} = 0$
- a pendulum is raised and released with an initial speed; its motion eventually stops due to air resistance; gravitational potential energy and kinetic energy transform to internal energy, $\Delta K + \Delta U + \Delta E_{\text{int}} = 0$ (Chapter 15)
- a battery is connected to a resistor; chemical potential energy in the battery transforms to internal energy in the resistor: $\Delta U + \Delta E_{\text{int}} = 0$ (Chapter 27)

Problem-Solving Strategy Isolated and Nonisolated Systems with No Nonconservative Forces: Conservation of Energy

Many problems in physics can be solved using the principle of conservation of energy. The following procedure should be used when you apply this principle:

1. Conceptualize. Study the physical situation carefully and form a mental representation of what is happening. As you become more proficient working energy problems, you will begin to be comfortable imagining the types of energy that are changing in the system and the types of energy transfers occurring across the system boundary.

2. Categorize. Define your system, which may consist of more than one object and may or may not include springs or other possibilities for storing potential energy. Identify the time interval over which you will analyze the energy changes in the problem. Determine if any energy transfers occur across the boundary of your system during this time interval. If so, use the nonisolated system model, $\Delta E_{\text{system}} = \Sigma T$, from Section 8.1. If not, use the isolated system model, $\Delta E_{\text{system}} = 0$.

Determine whether any nonconservative forces are present within the system. If so, use the techniques of Sections 8.3 and 8.4. If not, use the principle of conservation of energy as outlined below.

3. Analyze. Choose configurations to represent the initial and final conditions of the system based on your choice of time interval. For each object that changes elevation, select a reference position for the object that defines the zero configuration of gravitational potential energy for the system. For an object on a spring, the zero configuration for elastic potential energy is when the object is at its equilibrium position. If there is more than one conservative force, write an expression for the potential energy associated with each force.

Begin with Equation 8.2 and retain only those terms in the equation that are appropriate for the situation in the problem. Express each change of energy stored in the system as the final value minus the initial value. Substitute appropriate expressions for each initial and final value of energy storage on the left side of the equation and for the energy transfers on the right side of the equation. Solve for the unknown quantity.

continued

► **Problem-Solving Strategy** continued

4. Finalize. Make sure your results are consistent with your mental representation. Also make sure the values of your results are reasonable and consistent with connections to everyday experience.

Example 8.1

Ball in Free Fall

AM

A ball of mass m is dropped from a height h above the ground as shown in Figure 8.4.

(A) Neglecting air resistance, determine the speed of the ball when it is at a height y above the ground. Choose the system as the ball and the Earth.

SOLUTION

Conceptualize Figure 8.4 and our everyday experience with falling objects allow us to conceptualize the situation. Although we can readily solve this problem with the techniques of Chapter 2, let us practice an energy approach.

Categorize As suggested in the problem, we identify the system as the ball and the Earth. Because there is neither air resistance nor any other interaction between the system and the environment, the system is isolated and we use the *isolated system* model. The only force between members of the system is the gravitational force, which is conservative.

Analyze Because the system is isolated and there are no nonconservative forces acting within the system, we apply the principle of conservation of mechanical energy to the ball–Earth system. At the instant the ball is released, its kinetic energy is $K_i = 0$ and the gravitational potential energy of the system is $U_{gi} = mgh$. When the ball is at a position y above the ground, its kinetic energy is $K_f = \frac{1}{2}mv_f^2$ and the potential energy relative to the ground is $U_{gf} = mgy$.

Write the appropriate reduction of Equation 8.2, noting that the only types of energy in the system that change are kinetic energy and gravitational potential energy:

$$\Delta K + \Delta U_g = 0$$

Substitute for the energies:

$$\left(\frac{1}{2}mv_f^2 - 0\right) + (mgy - mgh) = 0$$

Solve for v_f :

$$v_f^2 = 2g(h - y) \quad \rightarrow \quad v_f = \sqrt{2g(h - y)}$$

The speed is always positive. If you had been asked to find the ball's velocity, you would use the negative value of the square root as the y component to indicate the downward motion.

(B) Find the speed of the ball again at height y by choosing the ball as the system.

SOLUTION

Categorize In this case, the only type of energy in the system that changes is kinetic energy. A single object that can be modeled as a particle cannot possess potential energy. The effect of gravity is to do work on the ball across the boundary of the system. We use the *nonisolated system* model.

Analyze Write the appropriate reduction of Equation 8.2:

$$\Delta K = W$$

Substitute for the initial and final kinetic energies and the work:

$$\begin{aligned} \left(\frac{1}{2}mv_f^2 - 0\right) &= \vec{\mathbf{F}}_g \cdot \Delta \vec{\mathbf{r}} = -mg\hat{\mathbf{j}} \cdot \Delta y\hat{\mathbf{j}} \\ &= -mg\Delta y = -mg(y - h) = mg(h - y) \end{aligned}$$

Solve for v_f :

$$v_f^2 = 2g(h - y) \quad \rightarrow \quad v_f = \sqrt{2g(h - y)}$$

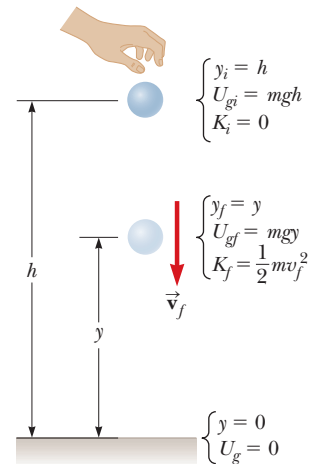


Figure 8.4 (Example 8.1) A ball is dropped from a height h above the ground. Initially, the total energy of the ball–Earth system is gravitational potential energy, equal to mgh relative to the ground. At the position y , the total energy is the sum of the kinetic and potential energies.

8.1 continued

Finalize The final result is the same, regardless of the choice of system. In your future problem solving, keep in mind that the choice of system is yours to make. Sometimes the problem is much easier to solve if a judicious choice is made as to the system to analyze.

WHAT IF? What if the ball were thrown downward from its highest position with a speed v_i ? What would its speed be at height y ?

Answer If the ball is thrown downward initially, we would expect its speed at height y to be larger than if simply dropped. Make your choice of system, either the ball alone or the ball and the Earth. You should find that either choice gives you the following result:

$$v_f = \sqrt{v_i^2 + 2g(h - y)}$$

Example 8.2 A Grand Entrance AM

You are designing an apparatus to support an actor of mass 65.0 kg who is to “fly” down to the stage during the performance of a play. You attach the actor’s harness to a 130-kg sandbag by means of a lightweight steel cable running smoothly over two frictionless pulleys as in Figure 8.5a. You need 3.00 m of cable between the harness and the nearest pulley so that the pulley can be hidden behind a curtain. For the apparatus to work successfully, the sandbag must never lift above the floor as the actor swings from above the stage to the floor. Let us call the initial angle that the actor’s cable makes with the vertical θ . What is the maximum value θ can have before the sandbag lifts off the floor?

SOLUTION

Conceptualize We must use several concepts to solve this problem. Imagine what happens as the actor approaches the bottom of the swing. At the bottom, the cable is vertical and must support his weight as well as provide centripetal acceleration of his body in the upward direction. At this point in his swing, the tension in the cable is the highest and the sandbag is most likely to lift off the floor.

Categorize Looking first at the swinging of the actor from the initial point to the lowest point, we model the actor and the Earth as an *isolated system*. We ignore air resistance, so there are no non-conservative forces acting. You might initially be tempted to model the system as nonisolated because of the interaction of the system with the cable, which is in the environment. The force applied to the actor by the cable, however, is always perpendicular to each element of the displacement of the actor and hence does no work. Therefore, in terms of energy transfers across the boundary, the system is isolated.

Analyze We first find the actor’s speed as he arrives at the floor as a function of the initial angle θ and the radius R of the circular path through which he swings.

From the isolated system model, make the appropriate reduction of Equation 8.2 for the actor–Earth system:

$$\Delta K + \Delta U_g = 0$$

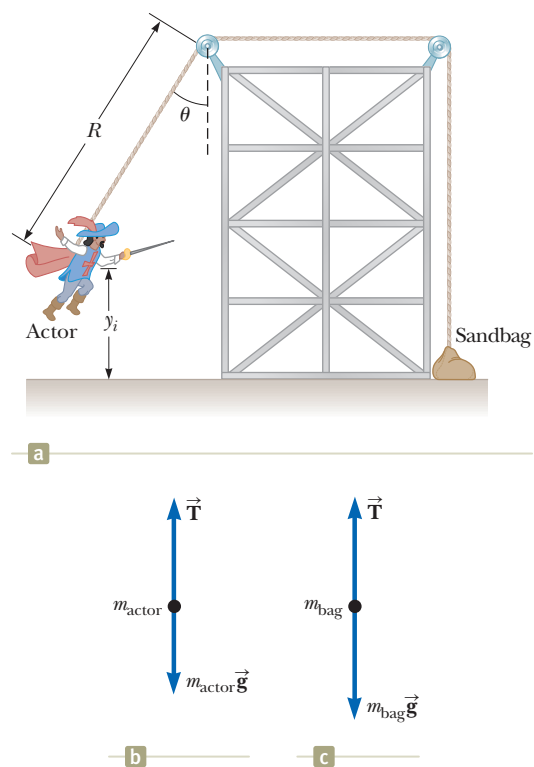


Figure 8.5 (Example 8.2) (a) An actor uses some clever staging to make his entrance. (b) The free-body diagram for the actor at the bottom of the circular path. (c) The free-body diagram for the sandbag if the normal force from the floor goes to zero.

continued

8.2 continued

Let y_i be the initial height of the actor above the floor and v_f be his speed at the instant before he lands. (Notice that $K_i = 0$ because the actor starts from rest and that $U_f = 0$ because we define the configuration of the actor at the floor as having a gravitational potential energy of zero.)

$$(1) \quad \left(\frac{1}{2}m_{\text{actor}}v_f^2 - 0\right) + (0 - m_{\text{actor}}gy_i) = 0$$

From the geometry in Figure 8.5a, notice that $y_f = 0$, so $y_i = R - R \cos \theta = R(1 - \cos \theta)$. Use this relationship in Equation (1) and solve for v_f^2 :

$$(2) \quad v_f^2 = 2gR(1 - \cos \theta)$$

Categorize Next, focus on the instant the actor is at the lowest point. Because the tension in the cable is transferred as a force applied to the sandbag, we model the actor at this instant as a *particle under a net force*. Because the actor moves along a circular arc, he experiences at the bottom of the swing a centripetal acceleration of v_f^2/r directed upward.

Analyze Apply Newton's second law from the particle under a net force model to the actor at the bottom of his path, using the free-body diagram in Figure 8.5b as a guide, and recognizing the acceleration as centripetal:

$$\sum F_y = T - m_{\text{actor}}g = m_{\text{actor}} \frac{v_f^2}{R}$$

$$(3) \quad T = m_{\text{actor}}g + m_{\text{actor}} \frac{v_f^2}{R}$$

Categorize Finally, notice that the sandbag lifts off the floor when the upward force exerted on it by the cable exceeds the gravitational force acting on it; the normal force from the floor is zero when that happens. We do *not*, however, want the sandbag to lift off the floor. The sandbag must remain at rest, so we model it as a *particle in equilibrium*.

Analyze A force T of the magnitude given by Equation (3) is transmitted by the cable to the sandbag. If the sandbag remains at rest but is just ready to be lifted off the floor if any more force were applied by the cable, the normal force on it becomes zero and the particle in equilibrium model tells us that $T = m_{\text{bag}}g$ as in Figure 8.5c.

Substitute this condition and Equation (2) into Equation (3):

$$m_{\text{bag}}g = m_{\text{actor}}g + m_{\text{actor}} \frac{2gR(1 - \cos \theta)}{R}$$

Solve for $\cos \theta$ and substitute the given parameters:

$$\cos \theta = \frac{3m_{\text{actor}} - m_{\text{bag}}}{2m_{\text{actor}}} = \frac{3(65.0 \text{ kg}) - 130 \text{ kg}}{2(65.0 \text{ kg})} = 0.500$$

$$\theta = 60.0^\circ$$

Finalize Here we had to combine several analysis models from different areas of our study. Notice that the length R of the cable from the actor's harness to the leftmost pulley did not appear in the final algebraic equation for $\cos \theta$. Therefore, the final answer is independent of R .

Example 8.3 The Spring-Loaded Poppun AM

The launching mechanism of a popgun consists of a trigger-released spring (Fig. 8.6a). The spring is compressed to a position y_{A} , and the trigger is fired. The projectile of mass m rises to a position y_{C} above the position at which it leaves the spring, indicated in Figure 8.6b as position $y_{\text{B}} = 0$. Consider a firing of the gun for which $m = 35.0 \text{ g}$, $y_{\text{A}} = -0.120 \text{ m}$, and $y_{\text{C}} = 20.0 \text{ m}$.

(A) Neglecting all resistive forces, determine the spring constant.

SOLUTION

Conceptualize Imagine the process illustrated in parts (a) and (b) of Figure 8.6. The projectile starts from rest at A , speeds up as the spring pushes upward on it, leaves the spring at B , and then slows down as the gravitational force pulls downward on it, eventually coming to rest at point C .

8.3 continued

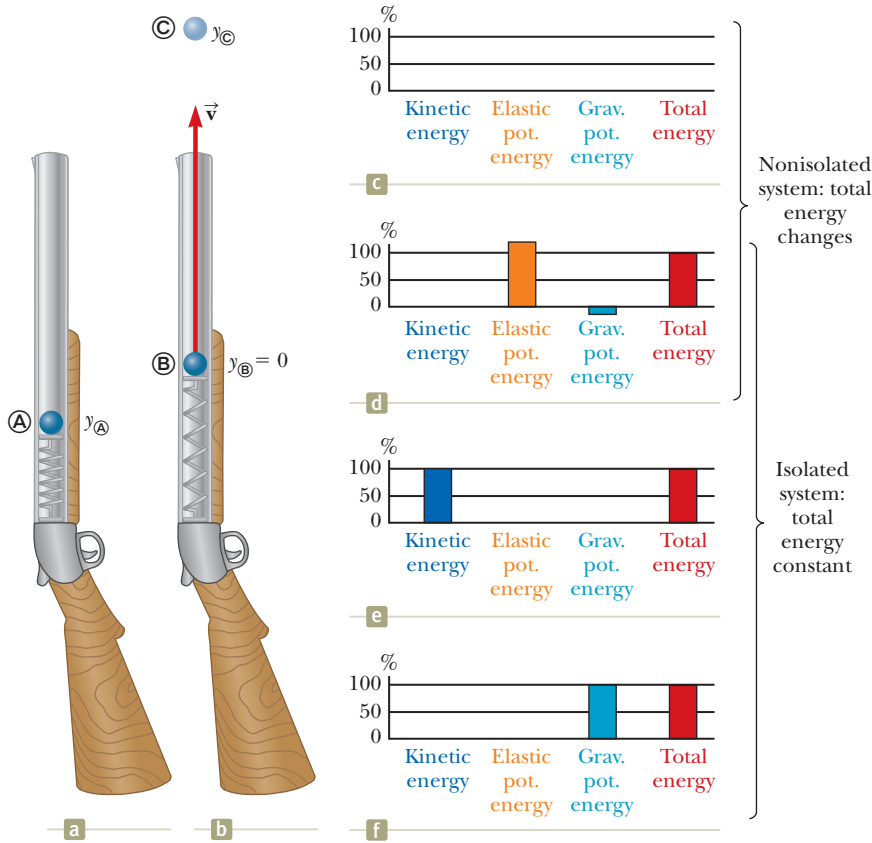


Figure 8.6 (Example 8.3) A spring-loaded popgun (a) before firing and (b) when the spring extends to its relaxed length. (c) An energy bar chart for the popgun–projectile–Earth system before the popgun is loaded. The energy in the system is zero. (d) The popgun is loaded by means of an external agent doing work on the system to push the spring downward. Therefore the system is nonisolated during this process. After the popgun is loaded, elastic potential energy is stored in the spring and the gravitational potential energy of the system is lower because the projectile is below point \textcircled{B} . (e) as the projectile passes through point \textcircled{B} , all of the energy of the isolated system is kinetic. (f) When the projectile reaches point \textcircled{C} , all of the energy of the isolated system is gravitational potential.

Categorize We identify the system as the projectile, the spring, and the Earth. We ignore both air resistance on the projectile and friction in the gun, so we model the system as isolated with no nonconservative forces acting.

Analyze Because the projectile starts from rest, its initial kinetic energy is zero. We choose the zero configuration for the gravitational potential energy of the system to be when the projectile leaves the spring at \textcircled{B} . For this configuration, the elastic potential energy is also zero.

After the gun is fired, the projectile rises to a maximum height $y_{\textcircled{C}}$. The final kinetic energy of the projectile is zero.

From the isolated system model, write a conservation of mechanical energy equation for the system between configurations when the projectile is at points \textcircled{A} and \textcircled{C} :

$$(1) \quad \Delta K + \Delta U_g + \Delta U_s = 0$$

Substitute for the initial and final energies:

$$(0 - 0) + (mgy_{\textcircled{C}} - mgy_{\textcircled{A}}) + (0 - \frac{1}{2}kx^2) = 0$$

Solve for k :

$$k = \frac{2mg(y_{\textcircled{C}} - y_{\textcircled{A}})}{x^2}$$

Substitute numerical values:

$$k = \frac{2(0.035 \text{ kg})(9.80 \text{ m/s}^2)[20.0 \text{ m} - (-0.120 \text{ m})]}{(0.120 \text{ m})^2} = 958 \text{ N/m}$$

(B) Find the speed of the projectile as it moves through the equilibrium position \textcircled{B} of the spring as shown in Figure 8.6b.

SOLUTION

Analyze The energy of the system as the projectile moves through the equilibrium position of the spring includes only the kinetic energy of the projectile $\frac{1}{2}mv_{\textcircled{B}}^2$. Both types of potential energy are equal to zero for this configuration of the system.

continued

8.3 continued

Write Equation (1) again for the system between points Ⓐ and Ⓑ:

$$\Delta K + \Delta U_g + \Delta U_s = 0$$

Substitute for the initial and final energies:

$$\left(\frac{1}{2}mv_{\text{B}}^2 - 0\right) + (0 - mgy_{\text{A}}) + (0 - \frac{1}{2}kx^2) = 0$$

Solve for v_{B} :

$$v_{\text{B}} = \sqrt{\frac{kx^2}{m} + 2gy_{\text{A}}}$$

Substitute numerical values:

$$v_{\text{B}} = \sqrt{\frac{(958 \text{ N/m})(0.120 \text{ m})^2}{(0.0350 \text{ kg})} + 2(9.80 \text{ m/s}^2)(-0.120 \text{ m})} = 19.8 \text{ m/s}$$

Finalize This example is the first one we have seen in which we must include two different types of potential energy. Notice in part (A) that we never needed to consider anything about the speed of the ball between points Ⓐ and Ⓑ, which is part of the power of the energy approach: changes in kinetic and potential energy depend only on the initial and final values, not on what happens between the configurations corresponding to these values.

8.3 Situations Involving Kinetic Friction

Consider again the book in Figure 7.18a sliding to the right on the surface of a heavy table and slowing down due to the friction force. Work is done by the friction force on the book because there is a force and a displacement. Keep in mind, however, that our equations for work involve the displacement of the point of application of the force. A simple model of the friction force between the book and the surface is shown in Figure 8.7a. We have represented the entire friction force between the book and surface as being due to two identical teeth that have been spot-welded together.² One tooth projects upward from the surface, the other downward from the book, and they are welded at the points where they touch. The friction force acts at the junction of the two teeth. Imagine that the book slides a small distance d to the right as in Figure 8.7b. Because the teeth are modeled as identical, the junction of the teeth moves to the right by a distance $d/2$. Therefore, the displacement of the point of application of the friction force is $d/2$, but the displacement of the book is d !

In reality, the friction force is spread out over the entire contact area of an object sliding on a surface, so the force is not localized at a point. In addition, because the magnitudes of the friction forces at various points are constantly changing as individual spot welds occur, the surface and the book deform locally, and so on, the displacement of the point of application of the friction force is not at all the same as the displacement of the book. In fact, the displacement of the point of application of the friction force is not calculable and so neither is the work done by the friction force.

The work–kinetic energy theorem is valid for a particle or an object that can be modeled as a particle. When a friction force acts, however, we cannot calculate the work done by friction. For such situations, Newton’s second law is still valid for the system even though the work–kinetic energy theorem is not. The case of a nondeformable object like our book sliding on the surface³ can be handled in a relatively straightforward way.

Starting from a situation in which forces, including friction, are applied to the book, we can follow a similar procedure to that done in developing Equation 7.17. Let us start by writing Equation 7.8 for all forces on an object other than friction:

$$\sum W_{\text{other forces}} = \int (\sum \vec{F}_{\text{other forces}}) \cdot d\vec{r} \quad (8.11)$$

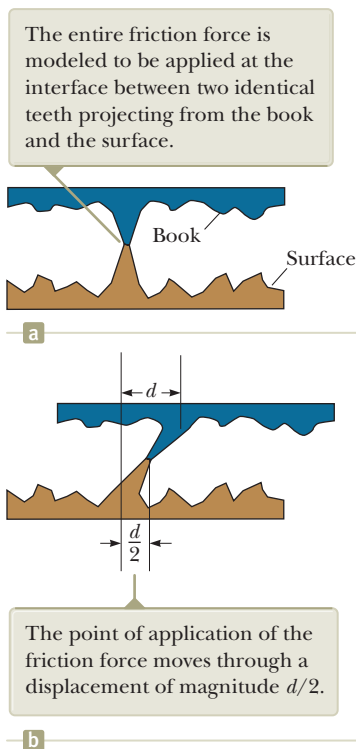


Figure 8.7 (a) A simplified model of friction between a book and a surface. (b) The book is moved to the right by a distance d .

²Figure 8.7 and its discussion are inspired by a classic article on friction: B. A. Sherwood and W. H. Bernard, “Work and heat transfer in the presence of sliding friction,” *American Journal of Physics*, 52:1001, 1984.

³The overall shape of the book remains the same, which is why we say it is nondeformable. On a microscopic level, however, there is deformation of the book’s face as it slides over the surface.

The $d\vec{r}$ in this equation is the displacement of the object because for forces other than friction, under the assumption that these forces do not deform the object, this displacement is the same as the displacement of the point of application of the forces. To each side of Equation 8.11 let us add the integral of the scalar product of the force of kinetic friction and $d\vec{r}$. In doing so, we are not defining this quantity as work! We are simply saying that it is a quantity that can be calculated mathematically and will turn out to be useful to us in what follows.

$$\begin{aligned}\sum W_{\text{other forces}} + \int \vec{f}_k \cdot d\vec{r} &= \int (\sum \vec{F}_{\text{other forces}}) \cdot d\vec{r} + \int \vec{f}_k \cdot d\vec{r} \\ &= \int (\sum \vec{F}_{\text{other forces}} + \vec{f}_k) \cdot d\vec{r}\end{aligned}$$

The integrand on the right side of this equation is the net force $\sum \vec{F}$ on the object, so

$$\sum W_{\text{other forces}} + \int \vec{f}_k \cdot d\vec{r} = \int \sum \vec{F} \cdot d\vec{r}$$

Incorporating Newton's second law $\sum \vec{F} = m\vec{a}$ gives

$$\sum W_{\text{other forces}} + \int \vec{f}_k \cdot d\vec{r} = \int m\vec{a} \cdot d\vec{r} = \int m \frac{d\vec{v}}{dt} \cdot d\vec{r} = \int_{t_i}^{t_f} m \frac{d\vec{v}}{dt} \cdot \vec{v} dt \quad (8.12)$$

where we have used Equation 4.3 to rewrite $d\vec{r}$ as $\vec{v} dt$. The scalar product obeys the product rule for differentiation (See Eq. B.30 in Appendix B.6), so the derivative of the scalar product of \vec{v} with itself can be written

$$\frac{d}{dt}(\vec{v} \cdot \vec{v}) = \frac{d\vec{v}}{dt} \cdot \vec{v} + \vec{v} \cdot \frac{d\vec{v}}{dt} = 2 \frac{d\vec{v}}{dt} \cdot \vec{v}$$

We used the commutative property of the scalar product to justify the final expression in this equation. Consequently,

$$\frac{d\vec{v}}{dt} \cdot \vec{v} = \frac{1}{2} \frac{d}{dt}(\vec{v} \cdot \vec{v}) = \frac{1}{2} \frac{dv^2}{dt}$$

Substituting this result into Equation 8.12 gives

$$\sum W_{\text{other forces}} + \int \vec{f}_k \cdot d\vec{r} = \int_{t_i}^{t_f} m \left(\frac{1}{2} \frac{dv^2}{dt} \right) dt = \frac{1}{2} m \int_{v_i}^{v_f} d(v^2) = \frac{1}{2} m v_f^2 - \frac{1}{2} m v_i^2 = \Delta K$$

Looking at the left side of this equation, notice that in the inertial frame of the surface, \vec{f}_k and $d\vec{r}$ will be in opposite directions for every increment $d\vec{r}$ of the path followed by the object. Therefore, $\vec{f}_k \cdot d\vec{r} = -f_k dr$. The previous expression now becomes

$$\sum W_{\text{other forces}} - \int f_k dr = \Delta K$$

In our model for friction, the magnitude of the kinetic friction force is constant, so f_k can be brought out of the integral. The remaining integral $\int dr$ is simply the sum of increments of length along the path, which is the total path length d . Therefore,

$$\sum W_{\text{other forces}} - f_k d = \Delta K \quad (8.13)$$

Equation 8.13 can be used when a friction force acts on an object. The change in kinetic energy is equal to the work done by all forces other than friction minus a term $f_k d$ associated with the friction force.

Considering the sliding book situation again, let's identify the larger system of the book *and* the surface as the book slows down under the influence of a friction force alone. There is no work done across the boundary of this system by other forces because the system does not interact with the environment. There are no other types of energy transfer occurring across the boundary of the system, assuming we ignore the inevitable sound the sliding book makes! In this case, Equation 8.2 becomes

$$\Delta E_{\text{system}} = \Delta K + \Delta E_{\text{int}} = 0$$

The change in kinetic energy of this book–surface system is the same as the change in kinetic energy of the book alone because the book is the only part of the system that is moving. Therefore, incorporating Equation 8.13 with no work done by other forces gives

$$-f_k d + \Delta E_{\text{int}} = 0$$

Change in internal energy due to a constant friction force within the system ▶

$$\Delta E_{\text{int}} = f_k d \quad (8.14)$$

Equation 8.14 tells us that the increase in internal energy of the system is equal to the product of the friction force and the path length through which the block moves. In summary, a friction force transforms kinetic energy in a system to internal energy. If work is done on the system by forces other than friction, Equation 8.13, with the help of Equation 8.14, can be written as

$$\sum W_{\text{other forces}} = W = \Delta K + \Delta E_{\text{int}} \quad (8.15)$$

which is a reduced form of Equation 8.2 and represents the nonisolated system model for a system within which a nonconservative force acts.

Quick Quiz 8.5 You are traveling along a freeway at 65 mi/h. Your car has kinetic energy. You suddenly skid to a stop because of congestion in traffic. Where is the kinetic energy your car once had? **(a)** It is all in internal energy in the road. **(b)** It is all in internal energy in the tires. **(c)** Some of it has transformed to internal energy and some of it transferred away by mechanical waves. **(d)** It is all transferred away from your car by various mechanisms.

Example 8.4 A Block Pulled on a Rough Surface **AM**

A 6.0-kg block initially at rest is pulled to the right along a horizontal surface by a constant horizontal force of 12 N.

(A) Find the speed of the block after it has moved 3.0 m if the surfaces in contact have a coefficient of kinetic friction of 0.15.

SOLUTION

Conceptualize This example is similar to Example 7.6 (page 190), but modified so that the surface is no longer frictionless. The rough surface applies a friction force on the block opposite to the applied force. As a result, we expect the speed to be lower than that found in Example 7.6.

Categorize The block is pulled by a force and the surface is rough, so the block and the surface are modeled as a *nonisolated system* with a nonconservative force acting.

Analyze Figure 8.8a illustrates this situation. Neither the normal force nor the gravitational force does work on the system because their points of application are displaced horizontally.

Find the work done on the system by the applied force just as in Example 7.6:

$$\sum W_{\text{other forces}} = W_F = F \Delta x$$

Apply the *particle in equilibrium* model to the block in the vertical direction:

$$\sum F_y = 0 \rightarrow n - mg = 0 \rightarrow n = mg$$

Find the magnitude of the friction force:

$$f_k = \mu_k n = \mu_k mg = (0.15)(6.0 \text{ kg})(9.80 \text{ m/s}^2) = 8.82 \text{ N}$$

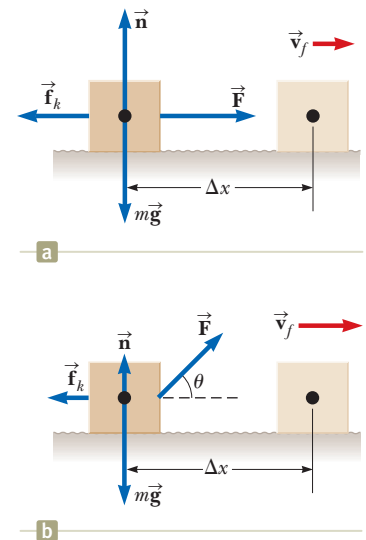


Figure 8.8 (Example 8.4) (a) A block pulled to the right on a rough surface by a constant horizontal force. (b) The applied force is at an angle θ to the horizontal.

8.4 continued

Substitute the energies into Equation 8.15 and solve for the final speed of the block:

$$F\Delta x = \Delta K + \Delta E_{\text{int}} = \left(\frac{1}{2}mv_f^2 - 0\right) + f_k d$$

$$v_f = \sqrt{\frac{2}{m}(-f_k d + F\Delta x)}$$

Substitute numerical values:

$$v_f = \sqrt{\frac{2}{6.0 \text{ kg}}[-(8.82 \text{ N})(3.0 \text{ m}) + (12 \text{ N})(3.0 \text{ m})]} = 1.8 \text{ m/s}$$

Finalize As expected, this value is less than the 3.5 m/s found in the case of the block sliding on a frictionless surface (see Example 7.6). The difference in kinetic energies between the block in Example 7.6 and the block in this example is equal to the increase in internal energy of the block–surface system in this example.

(B) Suppose the force \vec{F} is applied at an angle θ as shown in Figure 8.8b. At what angle should the force be applied to achieve the largest possible speed after the block has moved 3.0 m to the right?

SOLUTION

Conceptualize You might guess that $\theta = 0$ would give the largest speed because the force would have the largest component possible in the direction parallel to the surface. Think about \vec{F} applied at an arbitrary nonzero angle, however. Although the horizontal component of the force would be reduced, the vertical component of the force would reduce the normal force, in turn reducing the force of friction, which suggests that the speed could be maximized by pulling at an angle other than $\theta = 0$.

Categorize As in part (A), we model the block and the surface as a *nonisolated system* with a nonconservative force acting.

Analyze Find the work done by the applied force, noting that $\Delta x = d$ because the path followed by the block is a straight line:

$$(1) \quad \sum W_{\text{other forces}} = W_F = F\Delta x \cos \theta = Fd \cos \theta$$

Apply the particle in equilibrium model to the block in the vertical direction:

$$\sum F_y = n + F \sin \theta - mg = 0$$

Solve for n :

$$(2) \quad n = mg - F \sin \theta$$

Use Equation 8.15 to find the final kinetic energy for this situation:

$$W_F = \Delta K + \Delta E_{\text{int}} = (K_f - 0) + f_k d \rightarrow K_f = W_F - f_k d$$

Substitute the results in Equations (1) and (2):

$$K_f = Fd \cos \theta - \mu_k n d = Fd \cos \theta - \mu_k (mg - F \sin \theta) d$$

Maximizing the speed is equivalent to maximizing the final kinetic energy. Consequently, differentiate K_f with respect to θ and set the result equal to zero:

$$\frac{dK_f}{d\theta} = -Fd \sin \theta - \mu_k (0 - F \cos \theta) d = 0$$

$$-\sin \theta + \mu_k \cos \theta = 0$$

$$\tan \theta = \mu_k$$

Evaluate θ for $\mu_k = 0.15$:

$$\theta = \tan^{-1}(\mu_k) = \tan^{-1}(0.15) = 8.5^\circ$$

Finalize Notice that the angle at which the speed of the block is a maximum is indeed not $\theta = 0$. When the angle exceeds 8.5° , the horizontal component of the applied force is too small to be compensated by the reduced friction force and the speed of the block begins to decrease from its maximum value.

Conceptual Example 8.5

Useful Physics for Safer Driving

A car traveling at an initial speed v slides a distance d to a halt after its brakes lock. If the car's initial speed is instead $2v$ at the moment the brakes lock, estimate the distance it slides.

continued

8.5 continued

SOLUTION

Let us assume the force of kinetic friction between the car and the road surface is constant and the same for both speeds. According to Equation 8.13, the friction force multiplied by the distance d is equal to the initial kinetic energy of the car (because $K_f = 0$ and there is no work done by other forces). If the speed is doubled, as it is in this example, the kinetic energy is quadrupled. For a given friction force, the distance traveled is four times as great when the initial speed is doubled, and so the estimated distance the car slides is $4d$.

Example 8.6 A Block–Spring System AM

A block of mass 1.6 kg is attached to a horizontal spring that has a force constant of 1 000 N/m as shown in Figure 8.9a. The spring is compressed 2.0 cm and is then released from rest as in Figure 8.9b.

(A) Calculate the speed of the block as it passes through the equilibrium position $x = 0$ if the surface is frictionless.

SOLUTION

Conceptualize This situation has been discussed before, and it is easy to visualize the block being pushed to the right by the spring and moving with some speed at $x = 0$.

Categorize We identify the system as the block and model the block as a *nonisolated system*.

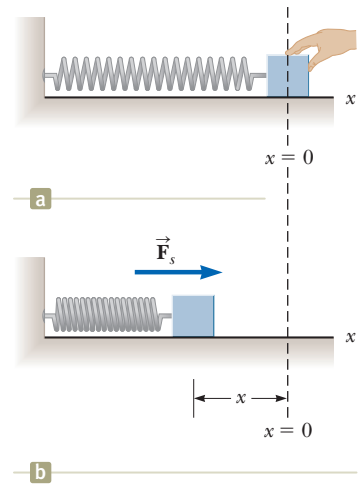
Analyze In this situation, the block starts with $v_i = 0$ at $x_i = -2.0$ cm, and we want to find v_f at $x_f = 0$.

Use Equation 7.11 to find the work done by the spring on the system with $x_{\text{max}} = x_i$:

Work is done on the block, and its speed changes. The conservation of energy equation, Equation 8.2, reduces to the work–kinetic energy theorem. Use that theorem to find the speed at $x = 0$:

Substitute numerical values:

Figure 8.9 (Example 8.6) (a) A block attached to a spring is pushed inward from an initial position $x = 0$ by an external agent. (b) At position x , the block is released from rest and the spring pushes it to the right.



$$W_s = \frac{1}{2}kx_{\text{max}}^2$$

$$W_s = \frac{1}{2}mv_f^2 - \frac{1}{2}mv_i^2$$

$$v_f = \sqrt{v_i^2 + \frac{2}{m}W_s} = \sqrt{v_i^2 + \frac{2}{m}\left(\frac{1}{2}kx_{\text{max}}^2\right)}$$

$$v_f = \sqrt{0 + \frac{2}{1.6 \text{ kg}} \left[\frac{1}{2}(1000 \text{ N/m})(0.020 \text{ m})^2 \right]} = 0.50 \text{ m/s}$$

Finalize Although this problem could have been solved in Chapter 7, it is presented here to provide contrast with the following part (B), which requires the techniques of this chapter.

(B) Calculate the speed of the block as it passes through the equilibrium position if a constant friction force of 4.0 N retards its motion from the moment it is released.

SOLUTION

Conceptualize The correct answer must be less than that found in part (A) because the friction force retards the motion.

Categorize We identify the system as the block and the surface, a *nonisolated system* because of the work done by the spring. There is a nonconservative force acting within the system: the friction between the block and the surface.

8.6 continued

Analyze Write Equation 8.15:

$$W_s = \Delta K + \Delta E_{\text{int}} = \left(\frac{1}{2}mv_f^2 - 0\right) + f_k d$$

Solve for v_f :

$$v_f = \sqrt{\frac{2}{m}(W_s - f_k d)}$$

Substitute for the work done by the spring:

$$v_f = \sqrt{\frac{2}{m}\left(\frac{1}{2}kx_{\text{max}}^2 - f_k d\right)}$$

Substitute numerical values:

$$v_f = \sqrt{\frac{2}{1.6 \text{ kg}} \left[\frac{1}{2}(1000 \text{ N/m})(0.020 \text{ m})^2 - (4.0 \text{ N})(0.020 \text{ m}) \right]} = 0.39 \text{ m/s}$$

Finalize As expected, this value is less than the 0.50 m/s found in part (A).

WHAT IF? What if the friction force were increased to 10.0 N? What is the block's speed at $x = 0$?

Answer In this case, the value of $f_k d$ as the block moves to $x = 0$ is

$$f_k d = (10.0 \text{ N})(0.020 \text{ m}) = 0.20 \text{ J}$$

which is equal in magnitude to the kinetic energy at $x = 0$ for the frictionless case. (Verify it!). Therefore, all the

kinetic energy has been transformed to internal energy by friction when the block arrives at $x = 0$, and its speed at this point is $v = 0$.

In this situation as well as that in part (B), the speed of the block reaches a maximum at some position other than $x = 0$. Problem 53 asks you to locate these positions.

8.4 Changes in Mechanical Energy for Nonconservative Forces

Consider the book sliding across the surface in the preceding section. As the book moves through a distance d , the only force in the horizontal direction is the force of kinetic friction. This force causes a change $-f_k d$ in the kinetic energy of the book as described by Equation 8.13.

Now, however, suppose the book is part of a system that also exhibits a change in potential energy. In this case, $-f_k d$ is the amount by which the *mechanical* energy of the system changes because of the force of kinetic friction. For example, if the book moves on an incline that is not frictionless, there is a change in both the kinetic energy and the gravitational potential energy of the book–Earth system. Consequently,

$$\Delta E_{\text{mech}} = \Delta K + \Delta U_g = -f_k d = -\Delta E_{\text{int}}$$

In general, if a nonconservative force acts within an isolated system,

$$\Delta K + \Delta U + \Delta E_{\text{int}} = 0 \quad (8.16)$$

where ΔU is the change in all forms of potential energy. We recognize Equation 8.16 as Equation 8.2 with no transfers of energy across the boundary of the system.

If the system in which nonconservative forces act is nonisolated and the external influence on the system is by means of work, the generalization of Equation 8.13 is

$$\sum W_{\text{other forces}} - f_k d = \Delta E_{\text{mech}}$$

This equation, with the help of Equations 8.7 and 8.14, can be written as

$$\sum W_{\text{other forces}} = W = \Delta K + \Delta U + \Delta E_{\text{int}} \quad (8.17)$$

This reduced form of Equation 8.2 represents the nonisolated system model for a system that possesses potential energy and within which a nonconservative force acts.

Example 8.7 **Crate Sliding Down a Ramp** **AM**

A 3.00-kg crate slides down a ramp. The ramp is 1.00 m in length and inclined at an angle of 30.0° as shown in Figure 8.10. The crate starts from rest at the top, experiences a constant friction force of magnitude 5.00 N, and continues to move a short distance on the horizontal floor after it leaves the ramp.

(A) Use energy methods to determine the speed of the crate at the bottom of the ramp.

SOLUTION

Conceptualize Imagine the crate sliding down the ramp in Figure 8.10. The larger the friction force, the more slowly the crate will slide.

Categorize We identify the crate, the surface, and the Earth as an *isolated system* with a nonconservative force acting.

Analyze Because $v_i = 0$, the initial kinetic energy of the system when the crate is at the top of the ramp is zero. If the y coordinate is measured from the bottom of the ramp (the final position of the crate, for which we choose the gravitational potential energy of the system to be zero) with the upward direction being positive, then $y_i = 0.500$ m.

Write the conservation of energy equation (Eq. 8.2) for this system: $\Delta K + \Delta U + \Delta E_{\text{int}} = 0$

Substitute for the energies: $(\frac{1}{2}mv_f^2 - 0) + (0 - mgy_i) + f_k d = 0$

Solve for v_f : $(1) \quad v_f = \sqrt{\frac{2}{m}(mgy_i - f_k d)}$

Substitute numerical values: $v_f = \sqrt{\frac{2}{3.00 \text{ kg}} [(3.00 \text{ kg})(9.80 \text{ m/s}^2)(0.500 \text{ m}) - (5.00 \text{ N})(1.00 \text{ m})]} = 2.54 \text{ m/s}$

(B) How far does the crate slide on the horizontal floor if it continues to experience a friction force of magnitude 5.00 N?

SOLUTION

Analyze This part of the problem is handled in exactly the same way as part (A), but in this case we can consider the mechanical energy of the system to consist only of kinetic energy because the potential energy of the system remains fixed.

Write the conservation of energy equation for this situation: $\Delta K + \Delta E_{\text{int}} = 0$

Substitute for the energies: $(0 - \frac{1}{2}mv_i^2) + f_k d = 0$

Solve for the distance d and substitute numerical values: $d = \frac{mv_i^2}{2f_k} = \frac{(3.00 \text{ kg})(2.54 \text{ m/s})^2}{2(5.00 \text{ N})} = 1.94 \text{ m}$

Finalize For comparison, you may want to calculate the speed of the crate at the bottom of the ramp in the case in which the ramp is frictionless. Also notice that the increase in internal energy of the system as the crate slides down the ramp is $f_k d = (5.00 \text{ N})(1.00 \text{ m}) = 5.00 \text{ J}$. This energy is shared between the crate and the surface, each of which is a bit warmer than before.

Also notice that the distance d the object slides on the horizontal surface is infinite if the surface is frictionless. Is that consistent with your conceptualization of the situation?

WHAT IF? A cautious worker decides that the speed of the crate when it arrives at the bottom of the ramp may be so large that its contents may be damaged. Therefore, he replaces the ramp with a longer one such that the new

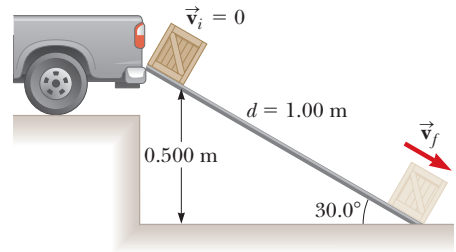


Figure 8.10 (Example 8.7) A crate slides down a ramp under the influence of gravity. The potential energy of the system decreases, whereas the kinetic energy increases.

8.7 continued

ramp makes an angle of 25.0° with the ground. Does this new ramp reduce the speed of the crate as it reaches the ground?

Answer Because the ramp is longer, the friction force acts over a longer distance and transforms more of the mechanical energy into internal energy. The result is a reduction in the kinetic energy of the crate, and we expect a lower speed as it reaches the ground.

Find the length d of the new ramp:

$$\sin 25.0^\circ = \frac{0.500 \text{ m}}{d} \quad \rightarrow \quad d = \frac{0.500 \text{ m}}{\sin 25.0^\circ} = 1.18 \text{ m}$$

Find v_f from Equation (1) in part (A):

$$v_f = \sqrt{\frac{2}{3.00 \text{ kg}} [(3.00 \text{ kg})(9.80 \text{ m/s}^2)(0.500 \text{ m}) - (5.00 \text{ N})(1.18 \text{ m})]} = 2.42 \text{ m/s}$$

The final speed is indeed lower than in the higher-angle case.

Example 8.8 Block-Spring Collision **AM**

A block having a mass of 0.80 kg is given an initial velocity $v_{\text{A}} = 1.2 \text{ m/s}$ to the right and collides with a spring whose mass is negligible and whose force constant is $k = 50 \text{ N/m}$ as shown in Figure 8.11.

(A) Assuming the surface to be frictionless, calculate the maximum compression of the spring after the collision.

SOLUTION

Conceptualize The various parts of Figure 8.11 help us imagine what the block will do in this situation. All motion takes place in a horizontal plane, so we do not need to consider changes in gravitational potential energy.

Categorize We identify the system to be the block and the spring and model it as an *isolated system* with no nonconservative forces acting.

Analyze Before the collision, when the block is at **A**, it has kinetic energy and the spring is uncompressed, so the elastic potential energy stored in the system is zero. Therefore, the total mechanical energy of the system before the collision is just $\frac{1}{2}mv_{\text{A}}^2$.

After the collision, when the block is at **C**, the spring is fully compressed; now the block is at rest and so has zero kinetic energy. The elastic potential energy stored in the system, however, has its maximum value $\frac{1}{2}kx^2 = \frac{1}{2}kx_{\text{max}}^2$, where the origin of coordinates $x = 0$ is chosen to be the equilibrium position of the spring and x_{max} is the maximum compression of the spring, which in this case happens to be x_{C} . The total mechanical energy of the system is conserved because no nonconservative forces act on objects within the isolated system.

Write the conservation of energy equation for this situation:

$$\Delta K + \Delta U = 0$$

Substitute for the energies:

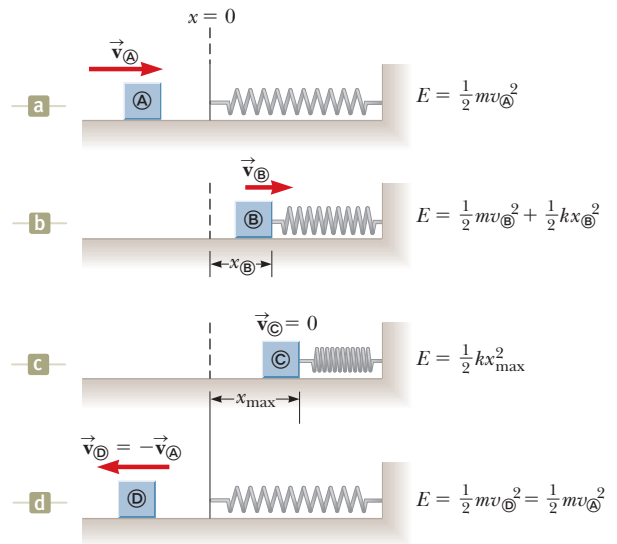
$$(0 - \frac{1}{2}mv_{\text{A}}^2) + (\frac{1}{2}kx_{\text{max}}^2 - 0) = 0$$

Solve for x_{max} and evaluate:

$$x_{\text{max}} = \sqrt{\frac{m}{k}} v_{\text{A}} = \sqrt{\frac{0.80 \text{ kg}}{50 \text{ N/m}}} (1.2 \text{ m/s}) = 0.15 \text{ m}$$

continued

Figure 8.11 (Example 8.8) A block sliding on a frictionless, horizontal surface collides with a light spring. (a) Initially, the mechanical energy is all kinetic energy. (b) The mechanical energy is the sum of the kinetic energy of the block and the elastic potential energy in the spring. (c) The energy is entirely potential energy. (d) The energy is transformed back to the kinetic energy of the block. The total energy of the system remains constant throughout the motion.



8.8 continued

(B) Suppose a constant force of kinetic friction acts between the block and the surface, with $\mu_k = 0.50$. If the speed of the block at the moment it collides with the spring is $v_{\text{A}} = 1.2$ m/s, what is the maximum compression x_{C} in the spring?

SOLUTION

Conceptualize Because of the friction force, we expect the compression of the spring to be smaller than in part (A) because some of the block's kinetic energy is transformed to internal energy in the block and the surface.

Categorize We identify the system as the block, the surface, and the spring. This is an *isolated system* but now involves a nonconservative force.

Analyze In this case, the mechanical energy $E_{\text{mech}} = K + U_s$ of the system is *not* conserved because a friction force acts on the block. From the *particle in equilibrium* model in the vertical direction, we see that $n = mg$.

Evaluate the magnitude of the friction force:

$$f_k = \mu_k n = \mu_k mg$$

Write the conservation of energy equation for this situation:

$$\Delta K + \Delta U + \Delta E_{\text{int}} = 0$$

Substitute the initial and final energies:

$$(0 - \frac{1}{2}mv_{\text{A}}^2) + (\frac{1}{2}kx_{\text{C}}^2 - 0) + \mu_k mgx_{\text{C}} = 0$$

Rearrange the terms into a quadratic equation:

$$kx_{\text{C}}^2 + 2\mu_k mgx_{\text{C}} - mv_{\text{A}}^2 = 0$$

Substitute numerical values:

$$50x_{\text{C}}^2 + 2(0.50)(0.80)(9.80)x_{\text{C}} - (0.80)(1.2)^2 = 0$$

$$50x_{\text{C}}^2 + 7.84x_{\text{C}} - 1.15 = 0$$

Solving the quadratic equation for x_{C} gives $x_{\text{C}} = 0.092$ m and $x_{\text{C}} = -0.25$ m. The physically meaningful root is $x_{\text{C}} = 0.092$ m.

Finalize The negative root does not apply to this situation because the block must be to the right of the origin (positive value of x) when it comes to rest. Notice that the value of 0.092 m is less than the distance obtained in the frictionless case of part (A) as we expected.

Example 8.9

Connected Blocks in Motion **AM**

Two blocks are connected by a light string that passes over a frictionless pulley as shown in Figure 8.12. The block of mass m_1 lies on a horizontal surface and is connected to a spring of force constant k . The system is released from rest when the spring is unstretched. If the hanging block of mass m_2 falls a distance h before coming to rest, calculate the coefficient of kinetic friction between the block of mass m_1 and the surface.

SOLUTION

Conceptualize The key word *rest* appears twice in the problem statement. This word suggests that the configurations of the system associated with rest are good candidates for the initial and final configurations because the kinetic energy of the system is zero for these configurations.

Categorize In this situation, the system consists of the two blocks, the spring, the surface, and the Earth. This is an *isolated system* with a nonconservative force acting. We also model the sliding block as a *particle in equilibrium* in the vertical direction, leading to $n = m_1g$.

Analyze We need to consider two forms of potential energy for the system, gravitational and elastic: $\Delta U_g = U_{gf} - U_{gi}$ is the change in the system's gravitational potential energy, and $\Delta U_s = U_{sf} - U_{si}$ is the change in the system's elastic potential energy. The change in the gravitational potential energy of the system is associated with only the falling block

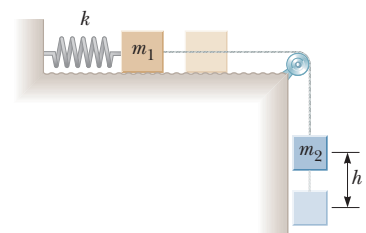


Figure 8.12 (Example 8.9) As the hanging block moves from its highest elevation to its lowest, the system loses gravitational potential energy but gains elastic potential energy in the spring. Some mechanical energy is transformed to internal energy because of friction between the sliding block and the surface.

8.9 continued

because the vertical coordinate of the horizontally sliding block does not change. The initial and final kinetic energies of the system are zero, so $\Delta K = 0$.

Write the appropriate reduction of Equation 8.2:

$$(1) \quad \Delta U_g + \Delta U_s + \Delta E_{\text{int}} = 0$$

Substitute for the energies, noting that as the hanging block falls a distance h , the horizontally moving block moves the same distance h to the right, and the spring stretches by a distance h :

$$(0 - m_2gh) + (\frac{1}{2}kh^2 - 0) + f_k h = 0$$

Substitute for the friction force:

$$-m_2gh + \frac{1}{2}kh^2 + \mu_k m_1gh = 0$$

Solve for μ_k :

$$\mu_k = \frac{m_2g - \frac{1}{2}kh}{m_1g}$$

Finalize This setup represents a method of measuring the coefficient of kinetic friction between an object and some surface. Notice how we have solved the examples in this chapter using the energy approach. We begin with Equation 8.2 and then tailor it to the physical situation. This process may include deleting terms, such as the kinetic energy term and all terms on the right-hand side of Equation 8.2 in this example. It can also include expanding terms, such as rewriting ΔU due to two types of potential energy in this example.

Conceptual Example 8.10

Interpreting the Energy Bars

The energy bar charts in Figure 8.13 show three instants in the motion of the system in Figure 8.12 and described in Example 8.9. For each bar chart, identify the configuration of the system that corresponds to the chart.

SOLUTION

In Figure 8.13a, there is no kinetic energy in the system. Therefore, nothing in the system is moving. The bar chart shows that the system contains only gravitational potential energy and no internal energy yet, which corresponds to the configuration with the darker blocks in Figure 8.12 and represents the instant just after the system is released.

In Figure 8.13b, the system contains four types of energy. The height of the gravitational potential energy bar is at 50%, which tells us that the hanging block has moved halfway between its position corresponding to Figure 8.13a and the position defined as $y = 0$. Therefore, in this configuration, the hanging block is between the dark and light images of the hanging block in Figure 8.12. The system has gained kinetic energy because the blocks are moving, elastic potential energy because the spring is stretching, and internal energy because of friction between the block of mass m_1 and the surface.

In Figure 8.13c, the height of the gravitational potential energy bar is zero, telling us that the hanging block is at $y = 0$. In addition, the height of the kinetic energy bar is zero, indicating that the blocks have stopped moving momentarily. Therefore, the configuration of the system is that shown by the light images of the blocks in Figure 8.12. The height of the elastic potential energy bar is high because the spring is stretched its maximum amount. The height of the internal energy bar is higher than in Figure 8.13b because the block of mass m_1 has continued to slide over the surface after the configuration shown in Figure 8.13b.

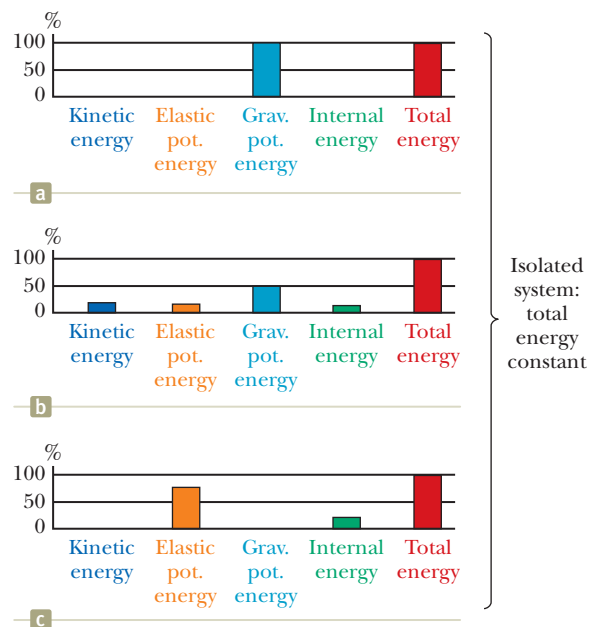


Figure 8.13 (Conceptual Example 8.10) Three energy bar charts are shown for the system in Figure 8.12.

8.5 Power

Consider Conceptual Example 7.7 again, which involved rolling a refrigerator up a ramp into a truck. Suppose the man is not convinced the work is the same regardless of the ramp's length and sets up a long ramp with a gentle rise. Although he does the same amount of work as someone using a shorter ramp, he takes longer to do the work because he has to move the refrigerator over a greater distance. Although the work done on both ramps is the same, there is *something* different about the tasks: the *time interval* during which the work is done.

The time rate of energy transfer is called the **instantaneous power** P and is defined as

Definition of power ▶

$$P \equiv \frac{dE}{dt} \quad (8.18)$$

We will focus on work as the energy transfer method in this discussion, but keep in mind that the notion of power is valid for *any* means of energy transfer discussed in Section 8.1. If an external force is applied to an object (which we model as a particle) and if the work done by this force on the object in the time interval Δt is W , the **average power** during this interval is

$$P_{\text{avg}} = \frac{W}{\Delta t}$$

Therefore, in Conceptual Example 7.7, although the same work is done in rolling the refrigerator up both ramps, less power is required for the longer ramp.

In a manner similar to the way we approached the definition of velocity and acceleration, the instantaneous power is the limiting value of the average power as Δt approaches zero:

$$P = \lim_{\Delta t \rightarrow 0} \frac{W}{\Delta t} = \frac{dW}{dt}$$

where we have represented the infinitesimal value of the work done by dW . We find from Equation 7.3 that $dW = \vec{\mathbf{F}} \cdot d\vec{\mathbf{r}}$. Therefore, the instantaneous power can be written

$$P = \frac{dW}{dt} = \vec{\mathbf{F}} \cdot \frac{d\vec{\mathbf{r}}}{dt} = \vec{\mathbf{F}} \cdot \vec{\mathbf{v}} \quad (8.19)$$

where $\vec{\mathbf{v}} = d\vec{\mathbf{r}}/dt$.

The SI unit of power is joules per second (J/s), also called the **watt** (W) after James Watt:

The watt ▶

$$1 \text{ W} = 1 \text{ J/s} = 1 \text{ kg} \cdot \text{m}^2/\text{s}^3$$

A unit of power in the U.S. customary system is the **horsepower** (hp):

$$1 \text{ hp} = 746 \text{ W}$$

A unit of energy (or work) can now be defined in terms of the unit of power. One **kilowatt-hour** (kWh) is the energy transferred in 1 h at the constant rate of 1 kW = 1 000 J/s. The amount of energy represented by 1 kWh is

$$1 \text{ kWh} = (10^3 \text{ W})(3\,600 \text{ s}) = 3.60 \times 10^6 \text{ J}$$

A kilowatt-hour is a unit of energy, not power. When you pay your electric bill, you are buying energy, and the amount of energy transferred by electrical transmission into a home during the period represented by the electric bill is usually expressed in kilowatt-hours. For example, your bill may state that you used 900 kWh of energy during a month and that you are being charged at the rate of 10¢ per kilowatt-hour. Your obligation is then \$90 for this amount of energy. As another example, suppose an electric bulb is rated at 100 W. In 1.00 h of operation, it would have energy transferred to it by electrical transmission in the amount of (0.100 kW)(1.00 h) = 0.100 kWh = 3.60×10^5 J.

Pitfall Prevention 8.3

W, W , and watts Do not confuse the symbol W for the watt with the italic symbol W for work. Also, remember that the watt already represents a rate of energy transfer, so “watts per second” does not make sense. The watt is *the same as* a joule per second.

Example 8.11 Power Delivered by an Elevator Motor AM

An elevator car (Fig. 8.14a) has a mass of 1 600 kg and is carrying passengers having a combined mass of 200 kg. A constant friction force of 4 000 N retards its motion.

(A) How much power must a motor deliver to lift the elevator car and its passengers at a constant speed of 3.00 m/s?

SOLUTION

Conceptualize The motor must supply the force of magnitude T that pulls the elevator car upward.

Categorize The friction force increases the power necessary to lift the elevator. The problem states that the speed of the elevator is constant, which tells us that $a = 0$. We model the elevator as a *particle in equilibrium*.

Analyze The free-body diagram in Figure 8.14b specifies the upward direction as positive. The *total* mass M of the system (car plus passengers) is equal to 1 800 kg.

Using the particle in equilibrium model, apply Newton's second law to the car:

$$\sum F_y = T - f - Mg = 0$$

Solve for T :

$$T = Mg + f$$

Use Equation 8.19 and that \vec{T} is in the same direction as \vec{v} to find the power:

$$P = \vec{T} \cdot \vec{v} = Tv = (Mg + f)v$$

Substitute numerical values:

$$P = [(1\,800\text{ kg})(9.80\text{ m/s}^2) + (4\,000\text{ N})](3.00\text{ m/s}) = 6.49 \times 10^4\text{ W}$$

(B) What power must the motor deliver at the instant the speed of the elevator is v if the motor is designed to provide the elevator car with an upward acceleration of 1.00 m/s^2 ?

SOLUTION

Conceptualize In this case, the motor must supply the force of magnitude T that pulls the elevator car upward with an increasing speed. We expect that more power will be required to do that than in part (A) because the motor must now perform the additional task of accelerating the car.

Categorize In this case, we model the elevator car as a *particle under a net force* because it is accelerating.

Analyze Using the particle under a net force model, apply Newton's second law to the car:

$$\sum F_y = T - f - Mg = Ma$$

Solve for T :

$$T = M(a + g) + f$$

Use Equation 8.19 to obtain the required power:

$$P = Tv = [M(a + g) + f]v$$

Substitute numerical values:

$$\begin{aligned} P &= [(1\,800\text{ kg})(1.00\text{ m/s}^2 + 9.80\text{ m/s}^2) + 4\,000\text{ N}]v \\ &= (2.34 \times 10^4)v \end{aligned}$$

where v is the instantaneous speed of the car in meters per second and P is in watts.

Finalize To compare with part (A), let $v = 3.00\text{ m/s}$, giving a power of

$$P = (2.34 \times 10^4\text{ N})(3.00\text{ m/s}) = 7.02 \times 10^4\text{ W}$$

which is larger than the power found in part (A), as expected.

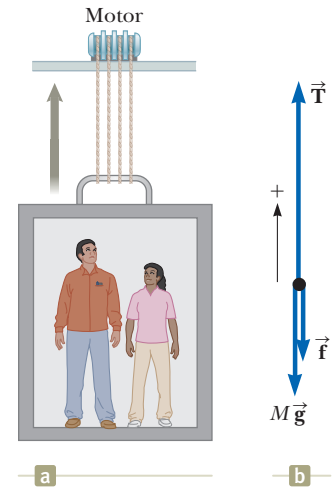


Figure 8.14 (Example 8.11) (a) The motor exerts an upward force \vec{T} on the elevator car. The magnitude of this force is the total tension T in the cables connecting the car and motor. The downward forces acting on the car are a friction force \vec{f} and the gravitational force $\vec{F}_g = M\vec{g}$. (b) The free-body diagram for the elevator car.

Summary

Definitions

■ A **nonisolated system** is one for which energy crosses the boundary of the system. An **isolated system** is one for which no energy crosses the boundary of the system.

■ The **instantaneous power** P is defined as the time rate of energy transfer:

$$P \equiv \frac{dE}{dt} \quad (8.18)$$

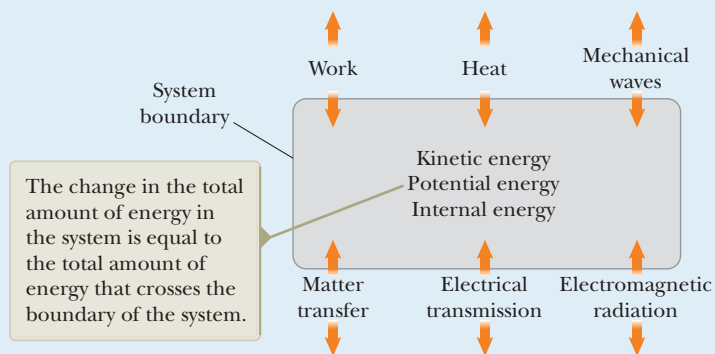
Concepts and Principles

■ For a nonisolated system, we can equate the change in the total energy stored in the system to the sum of all the transfers of energy across the system boundary, which is a statement of **conservation of energy**. For an isolated system, the total energy is constant.

■ If a friction force of magnitude f_k acts over a distance d within a system, the change in internal energy of the system is

$$\Delta E_{\text{int}} = f_k d \quad (8.14)$$

Analysis Models for Problem Solving



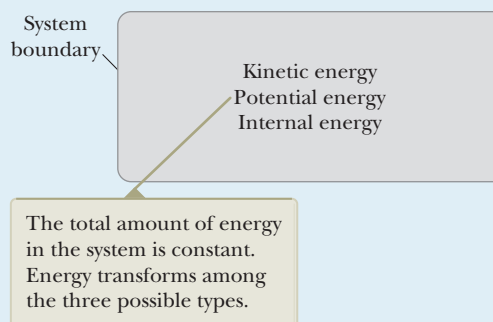
■ **Nonisolated System (Energy).** The most general statement describing the behavior of a nonisolated system is the **conservation of energy equation**:

$$\Delta E_{\text{system}} = \Sigma T \quad (8.1)$$

Including the types of energy storage and energy transfer that we have discussed gives

$$\Delta K + \Delta U + \Delta E_{\text{int}} = W + Q + T_{\text{MW}} + T_{\text{MT}} + T_{\text{ET}} + T_{\text{ER}} \quad (8.2)$$

For a specific problem, this equation is generally reduced to a smaller number of terms by eliminating the terms that are not appropriate to the situation.



■ **Isolated System (Energy).** The total energy of an isolated system is conserved, so

$$\Delta E_{\text{system}} = 0 \quad (8.10)$$

which can be written as

$$\Delta K + \Delta U + \Delta E_{\text{int}} = 0 \quad (8.16)$$

If no nonconservative forces act within the isolated system, the mechanical energy of the system is conserved, so

$$\Delta E_{\text{mech}} = 0 \quad (8.8)$$

which can be written as

$$\Delta K + \Delta U = 0 \quad (8.6)$$

Objective Questions

1. denotes answer available in *Student Solutions Manual/Study Guide*

- You hold a slingshot at arm's length, pull the light elastic band back to your chin, and release it to launch a pebble horizontally with speed 200 cm/s. With the same procedure, you fire a bean with speed 600 cm/s. What is the ratio of the mass of the bean to the mass of the pebble? (a) $\frac{1}{9}$ (b) $\frac{1}{3}$ (c) 1 (d) 3 (e) 9
- Two children stand on a platform at the top of a curving slide next to a backyard swimming pool. At the same moment the smaller child hops off to jump straight down into the pool, the bigger child releases herself at the top of the frictionless slide. (i) Upon reaching the water, the kinetic energy of the smaller child compared with that of the larger child is (a) greater (b) less (c) equal. (ii) Upon reaching the water, the speed of the smaller child compared with that of the larger child is (a) greater (b) less (c) equal. (iii) During their motions from the platform to the water, the average acceleration of the smaller child compared with that of the larger child is (a) greater (b) less (c) equal.
- At the bottom of an air track tilted at angle θ , a glider of mass m is given a push to make it coast a distance d up the slope as it slows down and stops. Then the glider comes back down the track to its starting point. Now the experiment is repeated with the same original speed but with a second identical glider set on top of the first. The airflow from the track is strong enough to support the stacked pair of gliders so that the combination moves over the track with negligible friction. Static friction holds the second glider stationary relative to the first glider throughout the motion. The coefficient of static friction between the two gliders is μ_s . What is the change in mechanical energy of the two-glider-Earth system in the up- and down-slope motion after the pair of gliders is released? Choose one. (a) $-2\mu_s mg$ (b) $-2mgd \cos \theta$ (c) $-2\mu_s mgd \cos \theta$ (d) 0 (e) $+2\mu_s mgd \cos \theta$
- An athlete jumping vertically on a trampoline leaves the surface with a velocity of 8.5 m/s upward. What maximum height does she reach? (a) 13 m (b) 2.3 m (c) 3.7 m (d) 0.27 m (e) The answer can't be determined because the mass of the athlete isn't given.
- Answer yes or no to each of the following questions. (a) Can an object-Earth system have kinetic energy and not gravitational potential energy? (b) Can it have gravitational potential energy and not kinetic energy? (c) Can it have both types of energy at the same moment? (d) Can it have neither?
- In a laboratory model of cars skidding to a stop, data are measured for four trials using two blocks. The blocks have identical masses but different coefficients of kinetic friction with a table: $\mu_k = 0.2$ and 0.8. Each block is launched with speed $v_i = 1$ m/s and slides across the level table as the block comes to rest. This process represents the first two trials. For the next two trials, the procedure is repeated but the blocks are launched with speed $v_i = 2$ m/s. Rank the four trials (a) through (d) according to the stopping distance from largest to smallest. If the stopping distance is the same in two cases, give them equal rank. (a) $v_i = 1$ m/s, $\mu_k = 0.2$ (b) $v_i = 1$ m/s, $\mu_k = 0.8$ (c) $v_i = 2$ m/s, $\mu_k = 0.2$ (d) $v_i = 2$ m/s, $\mu_k = 0.8$
- What average power is generated by a 70.0-kg mountain climber who climbs a summit of height 325 m in 95.0 min? (a) 39.1 W (b) 54.6 W (c) 25.5 W (d) 67.0 W (e) 88.4 W
- A ball of clay falls freely to the hard floor. It does not bounce noticeably, and it very quickly comes to rest. What, then, has happened to the energy the ball had while it was falling? (a) It has been used up in producing the downward motion. (b) It has been transformed back into potential energy. (c) It has been transferred into the ball by heat. (d) It is in the ball and floor (and walls) as energy of invisible molecular motion. (e) Most of it went into sound.
- A pile driver drives posts into the ground by repeatedly dropping a heavy object on them. Assume the object is dropped from the same height each time. By what factor does the energy of the pile driver-Earth system change when the mass of the object being dropped is doubled? (a) $\frac{1}{2}$ (b) 1; the energy is the same (c) 2 (d) 4

Conceptual Questions

1. denotes answer available in *Student Solutions Manual/Study Guide*

- One person drops a ball from the top of a building while another person at the bottom observes its motion. Will these two people agree (a) on the value of the gravitational potential energy of the ball-Earth system? (b) On the change in potential energy? (c) On the kinetic energy of the ball at some point in its motion?
- A car salesperson claims that a 300-hp engine is a necessary option in a compact car, in place of the conventional 130-hp engine. Suppose you intend to drive the car within speed limits (≤ 65 mi/h) on flat terrain. How would you counter this sales pitch?
- Does everything have energy? Give the reasoning for your answer.
- You ride a bicycle. In what sense is your bicycle solar-powered?
- A bowling ball is suspended from the ceiling of a lecture hall by a strong cord. The ball is drawn away from its equilibrium position and released from rest at the

tip of the demonstrator's nose as shown in Figure CQ8.5. The demonstrator remains stationary. (a) Explain why the ball does not strike her on its return swing. (b) Would this demonstrator be safe if the ball were given a push from its starting position at her nose?

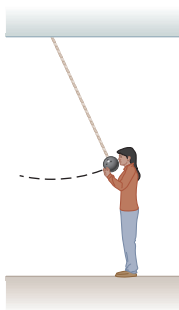


Figure CQ8.5

- Can a force of static friction do work? If not, why not? If so, give an example.
- In the general conservation of energy equation, state which terms predominate in describing each of the following devices and processes. For a process going on continuously, you may consider what happens in a 10-s time interval. State which terms in the equation represent original and final forms of energy, which would be inputs, and which outputs. (a) a slingshot firing a pebble (b) a fire burning (c) a portable radio operating (d) a car braking to a stop (e) the surface of the Sun shining visibly (f) a person jumping up onto a chair
- Consider the energy transfers and transformations listed below in parts (a) through (e). For each part, (i) describe human-made devices designed to produce each of the energy transfers or transformations

and, (ii) whenever possible, describe a natural process in which the energy transfer or transformation occurs. Give details to defend your choices, such as identifying the system and identifying other output energy if the device or natural process has limited efficiency. (a) Chemical potential energy transforms into internal energy. (b) Energy transferred by electrical transmission becomes gravitational potential energy. (c) Elastic potential energy transfers out of a system by heat. (d) Energy transferred by mechanical waves does work on a system. (e) Energy carried by electromagnetic waves becomes kinetic energy in a system.

- A block is connected to a spring that is suspended from the ceiling. Assuming air resistance is ignored, describe the energy transformations that occur within the system consisting of the block, the Earth, and the spring when the block is set into vertical motion.
- In Chapter 7, the work–kinetic energy theorem, $W = \Delta K$, was introduced. This equation states that work done on a system appears as a change in kinetic energy. It is a special-case equation, valid if there are no changes in any other type of energy such as potential or internal. Give two or three examples in which work is done on a system but the change in energy of the system is not a change in kinetic energy.

Problems



The problems found in this chapter may be assigned online in Enhanced WebAssign

- straightforward; 2. intermediate;
- challenging

1. full solution available in the *Student Solutions Manual/Study Guide*

AMT Analysis Model tutorial available in Enhanced WebAssign

GP Guided Problem

M Master It tutorial available in Enhanced WebAssign

W Watch It video solution available in Enhanced WebAssign

Section 8.1 Analysis Model: Nonisolated System (Energy)

- For each of the following systems and time intervals, write the appropriate version of Equation 8.2, the conservation of energy equation. (a) the heating coils in your toaster during the first five seconds after you turn the toaster on (b) your automobile from just before you fill it with gasoline until you pull away from the gas station at speed v (c) your body while you sit quietly and eat a peanut butter and jelly sandwich for lunch (d) your home during five minutes of a sunny afternoon while the temperature in the home remains fixed
- A ball of mass m falls from a height h to the floor. (a) Write the appropriate version of Equation 8.2 for the system of the ball and the Earth and use it to calculate the speed of the ball just before it strikes the Earth. (b) Write the appropriate version of Equation 8.2 for the system of the ball and use it to calculate the speed of the ball just before it strikes the Earth.

Section 8.2 Analysis Model: Isolated System (Energy)

- A block of mass 0.250 kg is placed on top of a light, vertical spring of force constant 5 000 N/m and pushed downward so that the spring is compressed by 0.100 m. After the block is released from rest, it travels upward and then leaves the spring. To what maximum height above the point of release does it rise?
- A 20.0-kg cannonball is fired from a cannon with muzzle speed of 1 000 m/s at an angle of 37.0° with the horizontal. A second ball is fired at an angle of 90.0° . Use the isolated system model to find (a) the maximum height reached by each ball and (b) the total mechanical energy of the ball–Earth system at the maximum height for each ball. Let $y = 0$ at the cannon.
- Review.** A bead slides without friction around a loop-the-loop (Fig. P8.5). The bead is released from rest at a height $h = 3.50R$. (a) What

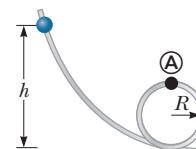


Figure P8.5

is its speed at point **A**? (b) How large is the normal force on the bead at point **A** if its mass is 5.00 g?

- 6.** A block of mass $m = 5.00$ kg is released from point **A** and slides on the frictionless track shown in Figure P8.6. Determine (a) the block's speed at points **B** and **C** and (b) the net work done by the gravitational force on the block as it moves from point **A** to point **C**.

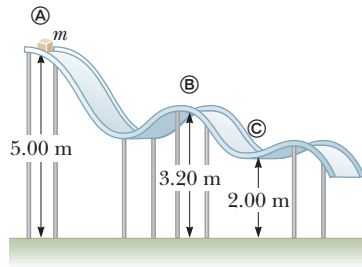


Figure P8.6

- 7.** Two objects are connected by a light string passing over a light, frictionless pulley as shown in Figure P8.7. The object of mass $m_1 = 5.00$ kg is released from rest at a height $h = 4.00$ m above the table. Using the isolated system model, (a) determine the speed of the object of mass $m_2 = 3.00$ kg just as the 5.00-kg object hits the table and (b) find the maximum height above the table to which the 3.00-kg object rises.

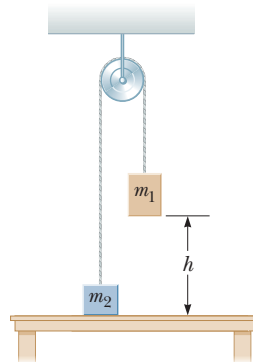


Figure P8.7

Problems 7 and 8.

- 8.** Two objects are connected by a light string passing over a light, frictionless pulley as shown in Figure P8.7. The object of mass m_1 is released from rest at height h above the table. Using the isolated system model, (a) determine the speed of m_2 just as m_1 hits the table and (b) find the maximum height above the table to which m_2 rises.
- 9.** A light, rigid rod is 77.0 cm long. Its top end is pivoted on a frictionless, horizontal axle. The rod hangs straight down at rest with a small, massive ball attached to its bottom end. You strike the ball, suddenly giving it a horizontal velocity so that it swings around in a full circle. What minimum speed at the bottom is required to make the ball go over the top of the circle?
- 10.** At 11:00 a.m. on September 7, 2001, more than one million British schoolchildren jumped up and down for one minute to simulate an earthquake. (a) Find the energy stored in the children's bodies that was converted into internal energy in the ground and their bodies and propagated into the ground by seismic waves during the experiment. Assume 1 050 000 children of average mass 36.0 kg jumped 12 times each, raising their centers of mass by 25.0 cm each time and briefly resting between one jump and the next. (b) Of the energy that propagated into the ground, most pro-

duced high-frequency "microtremor" vibrations that were rapidly damped and did not travel far. Assume 0.01% of the total energy was carried away by long-range seismic waves. The magnitude of an earthquake on the Richter scale is given by

$$M = \frac{\log E - 4.8}{1.5}$$

where E is the seismic wave energy in joules. According to this model, what was the magnitude of the demonstration quake?

- 11. Review.** The system shown in Figure P8.11 consists of a light, inextensible cord, light, frictionless pulleys, and blocks of equal mass. Notice that block B is attached to one of the pulleys. The system is initially held at rest so that the blocks are at the same height above the ground. The blocks are then released. Find the speed of block A at the moment the vertical separation of the blocks is h .

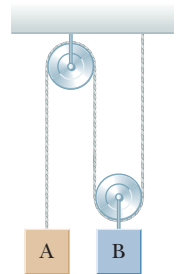


Figure P8.11

Section 8.3 Situations Involving Kinetic Friction

- 12.** A sled of mass m is given a kick on a frozen pond. The kick imparts to the sled an initial speed of 2.00 m/s. The coefficient of kinetic friction between sled and ice is 0.100. Use energy considerations to find the distance the sled moves before it stops.
- 13.** A sled of mass m is given a kick on a frozen pond. The kick imparts to the sled an initial speed of v . The coefficient of kinetic friction between sled and ice is μ_k . Use energy considerations to find the distance the sled moves before it stops.
- 14.** A crate of mass 10.0 kg is pulled up a rough incline with an initial speed of 1.50 m/s. The pulling force is 100 N parallel to the incline, which makes an angle of 20.0° with the horizontal. The coefficient of kinetic friction is 0.400, and the crate is pulled 5.00 m. (a) How much work is done by the gravitational force on the crate? (b) Determine the increase in internal energy of the crate-incline system owing to friction. (c) How much work is done by the 100-N force on the crate? (d) What is the change in kinetic energy of the crate? (e) What is the speed of the crate after being pulled 5.00 m?

- 15.** A block of mass $m = 2.00$ kg is attached to a spring of force constant $k = 500$ N/m as shown in Figure P8.15. The block is pulled to a position $x_i = 5.00$ cm to the right of equilibrium and released from rest. Find the speed the block has as it passes through equilibrium if (a) the horizontal surface is frictionless and (b) the coefficient of friction between block and surface is $\mu_k = 0.350$.

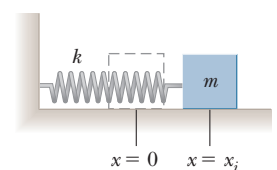


Figure P8.15

- 16.** A 40.0-kg box initially at rest is pushed 5.00 m along a rough, horizontal floor with a constant applied horizontal force of 130 N. The coefficient of friction

between box and floor is 0.300. Find (a) the work done by the applied force, (b) the increase in internal energy in the box–floor system as a result of friction, (c) the work done by the normal force, (d) the work done by the gravitational force, (e) the change in kinetic energy of the box, and (f) the final speed of the box.

17. A smooth circular hoop with a radius of 0.500 m is placed flat on the floor. A 0.400-kg particle slides around the inside edge of the hoop. The particle is given an initial speed of 8.00 m/s. After one revolution, its speed has dropped to 6.00 m/s because of friction with the floor. (a) Find the energy transformed from mechanical to internal in the particle–hoop–floor system as a result of friction in one revolution. (b) What is the total number of revolutions the particle makes before stopping? Assume the friction force remains constant during the entire motion.

Section 8.4 Changes in Mechanical Energy for Nonconservative Forces

18. At time t_i , the kinetic energy of a particle is 30.0 J and the potential energy of the system to which it belongs is 10.0 J. At some later time t_f , the kinetic energy of the particle is 18.0 J. (a) If only conservative forces act on the particle, what are the potential energy and the total energy of the system at time t_f ? (b) If the potential energy of the system at time t_f is 5.00 J, are any non-conservative forces acting on the particle? (c) Explain your answer to part (b).
19. A boy in a wheelchair (total mass 47.0 kg) has speed 1.40 m/s at the crest of a slope 2.60 m high and 12.4 m long. At the bottom of the slope his speed is 6.20 m/s. Assume air resistance and rolling resistance can be modeled as a constant friction force of 41.0 N. Find the work he did in pushing forward on his wheels during the downhill ride.

20. As shown in Figure P8.20, a green bead of mass 25 g slides along a straight wire. The length of the wire from point A to point B is 0.600 m, and point A is 0.200 m higher than point B. A constant friction force of magnitude 0.025 0 N acts on the bead. (a) If the bead is released from rest at point A, what is its speed at point B? (b) A red bead of mass 25 g slides along a curved wire, subject to a friction force with the same constant magnitude as that on the green bead. If the green and red beads are released simultaneously from rest at point A, which bead reaches point B with a higher speed? Explain.

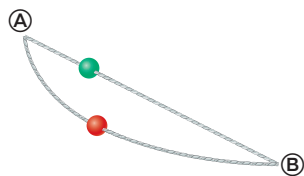


Figure P8.20

21. A toy cannon uses a spring to project a 5.30-g soft rubber ball. The spring is originally compressed by 5.00 cm and has a force constant of 8.00 N/m. When the cannon is fired, the ball moves 15.0 cm through the horizontal barrel of the cannon, and the barrel exerts a constant friction force of 0.032 0 N on the ball. (a) With what speed does the projectile leave the barrel

of the cannon? (b) At what point does the ball have maximum speed? (c) What is this maximum speed?

22. **AMT** The coefficient of friction between the block of mass $m_1 = 3.00$ kg and the surface in Figure P8.22 is $\mu_k = 0.400$. The system starts from rest. What is the speed of the ball of mass $m_2 = 5.00$ kg when it has fallen a distance $h = 1.50$ m?

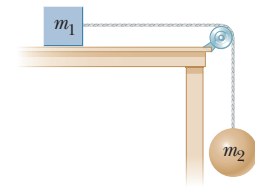


Figure P8.22

23. **M** A 5.00-kg block is set into motion up an inclined plane with an initial speed of $v_i = 8.00$ m/s (Fig. P8.23). The block comes to rest after traveling $d = 3.00$ m along the plane, which is inclined at an angle of $\theta = 30.0^\circ$ to the horizontal. For this motion, determine (a) the change in the block's kinetic energy, (b) the change in the potential energy of the block–Earth system, and (c) the friction force exerted on the block (assumed to be constant). (d) What is the coefficient of kinetic friction?

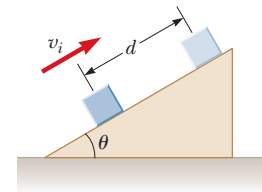


Figure P8.23

24. A 1.50-kg object is held 1.20 m above a relaxed massless, vertical spring with a force constant of 320 N/m. The object is dropped onto the spring. (a) How far does the object compress the spring? (b) **What If?** Repeat part (a), but this time assume a constant air-resistance force of 0.700 N acts on the object during its motion. (c) **What If?** How far does the object compress the spring if the same experiment is performed on the Moon, where $g = 1.63$ m/s² and air resistance is neglected?
25. **M** A 200-g block is pressed against a spring of force constant 1.40 kN/m until the block compresses the spring 10.0 cm. The spring rests at the bottom of a ramp inclined at 60.0° to the horizontal. Using energy considerations, determine how far up the incline the block moves from its initial position before it stops (a) if the ramp exerts no friction force on the block and (b) if the coefficient of kinetic friction is 0.400.

26. An 80.0-kg skydiver jumps out of a balloon at an altitude of 1 000 m and opens his parachute at an altitude of 200 m. (a) Assuming the total retarding force on the skydiver is constant at 50.0 N with the parachute closed and constant at 3 600 N with the parachute open, find the speed of the skydiver when he lands on the ground. (b) Do you think the skydiver will be injured? Explain. (c) At what height should the parachute be opened so that the final speed of the skydiver when he hits the ground is 5.00 m/s? (d) How realistic is the assumption that the total retarding force is constant? Explain.

27. **GP** A child of mass m starts from rest and slides without friction from a height h along a slide next to a pool (Fig. P8.27). She is launched from a height $h/5$ into the air over the pool. We wish to find the maximum height she reaches above the water in her projectile motion. (a) Is the child–Earth system isolated or

nonisolated? Why? (b) Is there a nonconservative force acting within the system? (c) Define the configuration of the system when the child is at the water level as having zero gravitational potential energy. Express the total energy of the system when the child is at the top of the waterslide. (d) Express the total energy of the system when the child is at the launching point. (e) Express the total energy of the system when the child is at the highest point in her projectile motion. (f) From parts (c) and (d), determine her initial speed v_i at the launch point in terms of g and h . (g) From parts (d), (e), and (f), determine her maximum airborne height y_{\max} in terms of h and the launch angle θ . (h) Would your answers be the same if the waterslide were not frictionless? Explain.

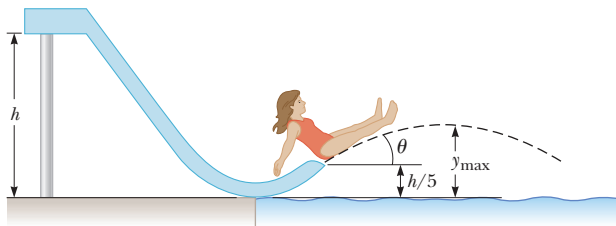


Figure P8.27

Section 8.5 Power

28. Sewage at a certain pumping station is raised vertically by 5.49 m at the rate of 1 890 000 liters each day. The sewage, of density $1\,050\text{ kg/m}^3$, enters and leaves the pump at atmospheric pressure and through pipes of equal diameter. (a) Find the output mechanical power of the lift station. (b) Assume an electric motor continuously operating with average power 5.90 kW runs the pump. Find its efficiency.
29. An 820-N Marine in basic training climbs a 12.0-m vertical rope at a constant speed in 8.00 s. What is his power output?
30. The electric motor of a model train accelerates the train from rest to 0.620 m/s in 21.0 ms. The total mass of the train is 875 g. (a) Find the minimum power delivered to the train by electrical transmission from the metal rails during the acceleration. (b) Why is it the minimum power?
31. When an automobile moves with constant speed down a highway, most of the power developed by the engine is used to compensate for the energy transformations due to friction forces exerted on the car by the air and the road. If the power developed by an engine is 175 hp, estimate the total friction force acting on the car when it is moving at a speed of 29 m/s. One horsepower equals 746 W.
32. A certain rain cloud at an altitude of 1.75 km contains $3.20 \times 10^7\text{ kg}$ of water vapor. How long would it take a 2.70-kW pump to raise the same amount of water from the Earth's surface to the cloud's position?
33. An energy-efficient lightbulb, taking in 28.0 W of power, can produce the same level of brightness as a conventional lightbulb operating at power 100 W. The lifetime of the energy-efficient bulb is 10 000 h and its purchase price is \$4.50, whereas the conventional bulb has a lifetime of 750 h and costs \$0.42. Determine the total savings obtained by using one energy-efficient bulb over its lifetime as opposed to using conventional bulbs over the same time interval. Assume an energy cost of \$0.200 per kilowatt-hour.
34. An electric scooter has a battery capable of supplying 120 Wh of energy. If friction forces and other losses account for 60.0% of the energy usage, what altitude change can a rider achieve when driving in hilly terrain if the rider and scooter have a combined weight of 890 N?
35. Make an order-of-magnitude estimate of the power a car engine contributes to speeding the car up to highway speed. In your solution, state the physical quantities you take as data and the values you measure or estimate for them. The mass of a vehicle is often given in the owner's manual.
36. An older-model car accelerates from 0 to speed v in a time interval of Δt . A newer, more powerful sports car accelerates from 0 to $2v$ in the same time period. Assuming the energy coming from the engine appears only as kinetic energy of the cars, compare the power of the two cars.
37. For saving energy, bicycling and walking are far more efficient means of transportation than is travel by automobile. For example, when riding at 10.0 mi/h, a cyclist uses food energy at a rate of about 400 kcal/h above what he would use if merely sitting still. (In exercise physiology, power is often measured in kcal/h rather than in watts. Here 1 kcal = 1 nutritionist's Calorie = 4 186 J.) Walking at 3.00 mi/h requires about 220 kcal/h. It is interesting to compare these values with the energy consumption required for travel by car. Gasoline yields about $1.30 \times 10^8\text{ J/gal}$. Find the fuel economy in equivalent miles per gallon for a person (a) walking and (b) bicycling.
38. A 650-kg elevator starts from rest. It moves upward for 3.00 s with constant acceleration until it reaches its cruising speed of 1.75 m/s. (a) What is the average power of the elevator motor during this time interval? (b) How does this power compare with the motor power when the elevator moves at its cruising speed?
39. A 3.50-kN piano is lifted by three workers at constant speed to an apartment 25.0 m above the street using a pulley system fastened to the roof of the building. Each worker is able to deliver 165 W of power, and the pulley system is 75.0% efficient (so that 25.0% of the mechanical energy is transformed to other forms due to friction in the pulley). Neglecting the mass of the pulley, find the time required to lift the piano from the street to the apartment.
40. Energy is conventionally measured in Calories as well as in joules. One Calorie in nutrition is one kilocalorie, defined as 1 kcal = 4 186 J. Metabolizing 1 g of fat can release 9.00 kcal. A student decides to try to lose weight by exercising. He plans to run up and down the stairs in a football stadium as fast as he can and

as many times as necessary. To evaluate the program, suppose he runs up a flight of 80 steps, each 0.150 m high, in 65.0 s. For simplicity, ignore the energy he uses in coming down (which is small). Assume a typical efficiency for human muscles is 20.0%. This statement means that when your body converts 100 J from metabolizing fat, 20 J goes into doing mechanical work (here, climbing stairs). The remainder goes into extra internal energy. Assume the student's mass is 75.0 kg. (a) How many times must the student run the flight of stairs to lose 1.00 kg of fat? (b) What is his average power output, in watts and in horsepower, as he runs up the stairs? (c) Is this activity in itself a practical way to lose weight?

- 41.** A loaded ore car has a mass of 950 kg and rolls on rails with negligible friction. It starts from rest and is pulled up a mine shaft by a cable connected to a winch. The shaft is inclined at 30.0° above the horizontal. The car accelerates uniformly to a speed of 2.20 m/s in 12.0 s and then continues at constant speed. (a) What power must the winch motor provide when the car is moving at constant speed? (b) What maximum power must the winch motor provide? (c) What total energy has transferred out of the motor by work by the time the car moves off the end of the track, which is of length 1 250 m?

Additional Problems

- 42.** Make an order-of-magnitude estimate of your power output as you climb stairs. In your solution, state the physical quantities you take as data and the values you measure or estimate for them. Do you consider your peak power or your sustainable power?
- 43.** A small block of mass $m = 200$ g is released from rest at point **A** along the horizontal diameter on the inside of a frictionless, hemispherical bowl of radius $R = 30.0$ cm (Fig. P8.43). Calculate (a) the gravitational potential energy of the block–Earth system when the block is at point **A** relative to point **B**, (b) the kinetic energy of the block at point **B**, (c) its speed at point **B**, and (d) its kinetic energy and the potential energy when the block is at point **C**.

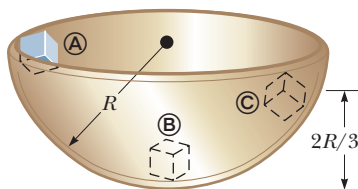


Figure P8.43 Problems 43 and 44.

- 44. What If?** The block of mass $m = 200$ g described in Problem 43 (Fig. P8.43) is released from rest at point **A**, and the surface of the bowl is rough. The block's speed at point **B** is 1.50 m/s. (a) What is its kinetic energy at point **B**? (b) How much mechanical energy is transformed into internal energy as the block moves from point **A** to point **B**? (c) Is it possible to determine the coefficient of friction from these results in any simple manner? (d) Explain your answer to part (c).

- 45. Review.** A boy starts at rest and slides down a frictionless slide as in Figure P8.45. The bottom of the track is a height h above the ground. The boy then leaves the track horizontally, striking the ground at a distance d as shown. Using energy methods, determine the initial height H of the boy above the ground in terms of h and d .

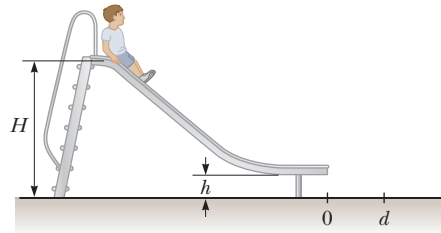


Figure P8.45

- 46. Review.** As shown in Figure P8.46, a light string that does not stretch changes from horizontal to vertical as it passes over the edge of a table. The string connects m_1 , a 3.50-kg block originally at rest on the horizontal table at a height $h = 1.20$ m above the floor, to m_2 , a hanging 1.90-kg block originally a distance $d = 0.900$ m above the floor. Neither the surface of the table nor its edge exerts a force of kinetic friction. The blocks start to move from rest. The sliding block m_1 is projected horizontally after reaching the edge of the table. The hanging block m_2 stops without bouncing when it strikes the floor. Consider the two blocks plus the Earth as the system. (a) Find the speed at which m_1 leaves the edge of the table. (b) Find the impact speed of m_1 on the floor. (c) What is the shortest length of the string so that it does not go taut while m_1 is in flight? (d) Is the energy of the system when it is released from rest equal to the energy of the system just before m_1 strikes the ground? (e) Why or why not?

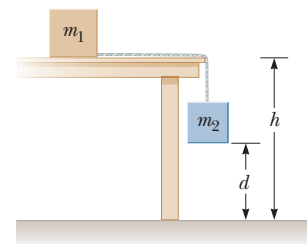


Figure P8.46

- 47.** A 4.00-kg particle moves along the x axis. Its position varies with time according to $x = t + 2.0t^3$, where x is in meters and t is in seconds. Find (a) the kinetic energy of the particle at any time t , (b) the acceleration of the particle and the force acting on it at time t , (c) the power being delivered to the particle at time t , and (d) the work done on the particle in the interval $t = 0$ to $t = 2.00$ s.

- 48. Why is the following situation impossible?** A softball pitcher has a strange technique: she begins with her hand at rest at the highest point she can reach and then quickly rotates her arm backward so that the ball moves through a half-circle path. She releases the ball when her hand reaches the bottom of the path. The pitcher maintains a component of force on the 0.180-kg ball of constant magnitude 12.0 N in the direction of motion around the complete path. As the ball arrives

at the bottom of the path, it leaves her hand with a speed of 25.0 m/s.

49. A skateboarder with his board can be modeled as a particle of mass 76.0 kg, located at his center of mass (which we will study in Chapter 9). As shown in Figure P8.49, the skateboarder starts from rest in a crouching position at one lip of a half-pipe (point A). The half-pipe is one half of a cylinder of radius 6.80 m with its axis horizontal. On his descent, the skateboarder moves without friction so that his center of mass moves through one quarter of a circle of radius 6.30 m. (a) Find his speed at the bottom of the half-pipe (point B). (b) Immediately after passing point B, he stands up and raises his arms, lifting his center of mass from 0.500 m to 0.950 m above the concrete (point C). Next, the skateboarder glides upward with his center of mass moving in a quarter circle of radius 5.85 m. His body is horizontal when he passes point D, the far lip of the half-pipe. As he passes through point D, the speed of the skateboarder is 5.14 m/s. How much chemical potential energy in the body of the skateboarder was converted to mechanical energy in the skateboarder–Earth system when he stood up at point B? (c) How high above point D does he rise? *Caution:* Do not try this stunt yourself without the required skill and protective equipment.

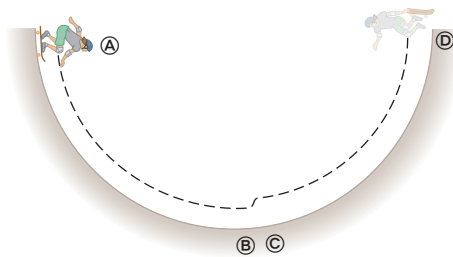


Figure P8.49

50. Heedless of danger, a child leaps onto a pile of old mattresses to use them as a trampoline. His motion between two particular points is described by the energy conservation equation

$$\frac{1}{2}(46.0 \text{ kg})(2.40 \text{ m/s})^2 + (46.0 \text{ kg})(9.80 \text{ m/s}^2)(2.80 \text{ m} + x) = \frac{1}{2}(1.94 \times 10^4 \text{ N/m})x^2$$

(a) Solve the equation for x . (b) Compose the statement of a problem, including data, for which this equation gives the solution. (c) Add the two values of x obtained in part (a) and divide by 2. (d) What is the significance of the resulting value in part (c)?

- 51.** Jonathan is riding a bicycle and encounters a hill of height 7.30 m. At the base of the hill, he is traveling at 6.00 m/s. When he reaches the top of the hill, he is traveling at 1.00 m/s. Jonathan and his bicycle together have a mass of 85.0 kg. Ignore friction in the bicycle mechanism and between the bicycle tires and the road. (a) What is the total external work done on the system of Jonathan and the bicycle between the time he starts up the hill and the time he reaches the top? (b) What is the change in potential energy stored in Jonathan's body during this process? (c) How much work does

Jonathan do on the bicycle pedals within the Jonathan–bicycle–Earth system during this process?

52. Jonathan is riding a bicycle and encounters a hill of height h . At the base of the hill, he is traveling at a speed v_i . When he reaches the top of the hill, he is traveling at a speed v_f . Jonathan and his bicycle together have a mass m . Ignore friction in the bicycle mechanism and between the bicycle tires and the road. (a) What is the total external work done on the system of Jonathan and the bicycle between the time he starts up the hill and the time he reaches the top? (b) What is the change in potential energy stored in Jonathan's body during this process? (c) How much work does Jonathan do on the bicycle pedals within the Jonathan–bicycle–Earth system during this process?
53. Consider the block–spring–surface system in part (B) of Example 8.6. (a) Using an energy approach, find the position x of the block at which its speed is a maximum. (b) In the **What If?** section of this example, we explored the effects of an increased friction force of 10.0 N. At what position of the block does its maximum speed occur in this situation?

54. As it plows a parking lot, a snowplow pushes an ever-growing pile of snow in front of it. Suppose a car moving through the air is similarly modeled as a cylinder of area A pushing a growing disk of air in front of it. The originally stationary air is set into motion as shown in Figure P8.54.

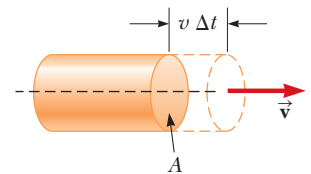


Figure P8.54

- In a time interval Δt , a new disk of air of mass Δm must be moved a distance $v \Delta t$ and hence must be given a kinetic energy $\frac{1}{2}(\Delta m)v^2$. Using this model, show that the car's power loss owing to air resistance is $\frac{1}{2}\rho Av^3$ and that the resistive force acting on the car is $\frac{1}{2}\rho Av^2$, where ρ is the density of air. Compare this result with the empirical expression $\frac{1}{2}D\rho Av^2$ for the resistive force.
55. A wind turbine on a wind farm turns in response to a force of high-speed air resistance, $R = \frac{1}{2}D\rho Av^2$. The power available is $P = Rv = \frac{1}{2}D\rho\pi r^2 v^3$, where v is the wind speed and we have assumed a circular face for the wind turbine of radius r . Take the drag coefficient as $D = 1.00$ and the density of air from the front endpaper. For a wind turbine having $r = 1.50$ m, calculate the power available with (a) $v = 8.00$ m/s and (b) $v = 24.0$ m/s. The power delivered to the generator is limited by the efficiency of the system, about 25%. For comparison, a large American home uses about 2 kW of electric power.

56. Consider the popgun in Example 8.3. Suppose the projectile mass, compression distance, and spring constant remain the same as given or calculated in the example. Suppose, however, there is a friction force of magnitude 2.00 N acting on the projectile as it rubs against the interior of the barrel. The vertical length from point A to the end of the barrel is 0.600 m.

(a) After the spring is compressed and the popgun fired, to what height does the projectile rise above point \textcircled{B} ? (b) Draw four energy bar charts for this situation, analogous to those in Figures 8.6c–d.

57. As the driver steps on the gas pedal, a car of mass 1600 kg accelerates from rest. During the first few seconds of motion, the car's acceleration increases with time according to the expression

$$a = 1.16t - 0.210t^2 + 0.240t^3$$

where t is in seconds and a is in m/s^2 . (a) What is the change in kinetic energy of the car during the interval from $t = 0$ to $t = 2.50$ s? (b) What is the minimum average power output of the engine over this time interval? (c) Why is the value in part (b) described as the *minimum* value?

58. **Review.** Why is the following situation impossible? A new high-speed roller coaster is claimed to be so safe that the passengers do not need to wear seat belts or any other restraining device. The coaster is designed with a vertical circular section over which the coaster travels on the inside of the circle so that the passengers are upside down for a short time interval. The radius of the circular section is 12.0 m, and the coaster enters the bottom of the circular section at a speed of 22.0 m/s. Assume the coaster moves without friction on the track and model the coaster as a particle.

59. A horizontal spring attached to a wall has a force constant of $k = 850$ N/m. A block of mass $m = 1.00$ kg is attached to the spring and rests on a frictionless, horizontal surface as in Figure P8.59. (a) The block is pulled to a position $x_i = 6.00$ cm from equilibrium and released. Find the elastic potential energy stored in the spring when the block is 6.00 cm from equilibrium and when the block passes through equilibrium. (b) Find the speed of the block as it passes through the equilibrium point. (c) What is the speed of the block when it is at a position $x_f/2 = 3.00$ cm? (d) Why isn't the answer to part (c) half the answer to part (b)?

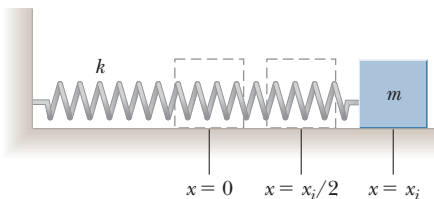


Figure P8.59

60. More than 2300 years ago, the Greek teacher Aristotle wrote the first book called *Physics*. Put into more precise terminology, this passage is from the end of its Section Eta:

Let P be the power of an agent causing motion; w , the load moved; d , the distance covered; and Δt , the time interval required. Then (1) a power equal to P will in an interval of time equal to Δt move $w/2$ a distance $2d$; or (2) it will move $w/2$ the given distance d in the time interval $\Delta t/2$. Also, if (3) the given power P moves the given

load w a distance $d/2$ in time interval $\Delta t/2$, then (4) $P/2$ will move $w/2$ the given distance d in the given time interval Δt .

(a) Show that Aristotle's proportions are included in the equation $P\Delta t = bwd$, where b is a proportionality constant. (b) Show that our theory of motion includes this part of Aristotle's theory as one special case. In particular, describe a situation in which it is true, derive the equation representing Aristotle's proportions, and determine the proportionality constant.

61. A child's pogo stick (Fig. P8.61) stores energy in a spring with a force constant of 2.50×10^4 N/m. At position \textcircled{A} ($x_{\text{A}} = -0.100$ m), the spring compression is a maximum and the child is momentarily at rest. At position \textcircled{B} ($x_{\text{B}} = 0$), the spring is relaxed and the child is moving upward. At position \textcircled{C} , the child is again momentarily at rest at the top of the jump. The combined mass of child and pogo stick is 25.0 kg. Although the boy must lean forward to remain balanced, the angle is small, so let's assume the pogo stick is vertical. Also assume the boy does not bend his legs during the motion.

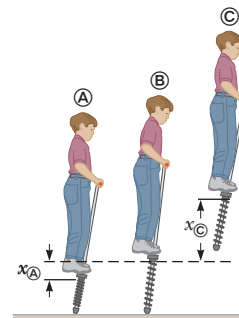


Figure P8.61

(a) Calculate the total energy of the child–stick–Earth system, taking both gravitational and elastic potential energies as zero for $x = 0$. (b) Determine x_{C} . (c) Calculate the speed of the child at $x = 0$. (d) Determine the value of x for which the kinetic energy of the system is a maximum. (e) Calculate the child's maximum upward speed.

62. A 1.00-kg object slides to the right on a surface having a coefficient of kinetic friction 0.250 (Fig. P8.62a). The object has a speed of $v_i = 3.00$ m/s when it makes contact with a light spring (Fig. P8.62b) that has a force constant of 50.0 N/m.

The object comes to rest after the spring has been compressed a distance d (Fig. P8.62c). The object is then forced toward the left by the spring (Fig. P8.62d) and continues to move in that direction beyond the spring's unstretched position. Finally, the object comes to rest a distance D to the left of the unstretched spring (Fig. P8.62e). Find (a) the distance of compression d , (b) the speed v at the unstretched position when the object is moving to the left (Fig. P8.62d), and (c) the distance D where the object comes to rest.

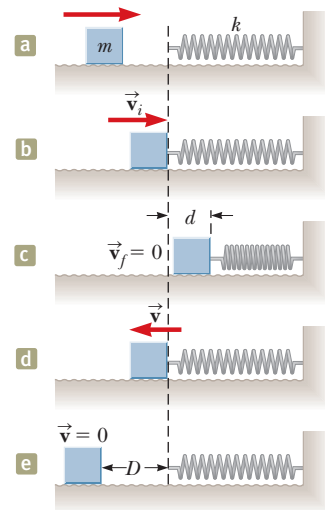


Figure P8.62

- 63.** A 10.0-kg block is released from rest at point **A** in Figure P8.63. The track is frictionless except for the portion between points **B** and **C**, which has a length of 6.00 m. The block travels down the track, hits a spring of force constant $2\,250\text{ N/m}$, and compresses the spring 0.300 m from its equilibrium position before coming to rest momentarily. Determine the coefficient of kinetic friction between the block and the rough surface between points **B** and **C**.

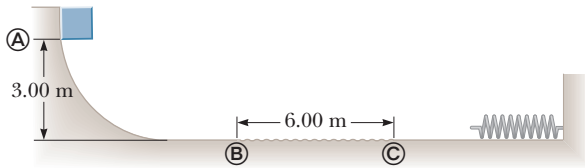


Figure P8.63

- 64.** A block of mass $m_1 = 20.0\text{ kg}$ is connected to a block of mass $m_2 = 30.0\text{ kg}$ by a massless string that passes over a light, frictionless pulley. The 30.0-kg block is connected to a spring that has negligible mass and a force constant of $k = 250\text{ N/m}$ as shown in Figure P8.64. The spring is unstretched when the system is as shown in the figure, and the incline is frictionless. The 20.0-kg block is pulled a distance $h = 20.0\text{ cm}$ down the incline of angle $\theta = 40.0^\circ$ and released from rest. Find the speed of each block when the spring is again unstretched.

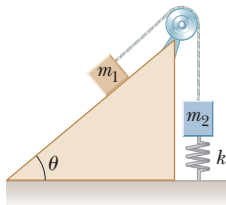


Figure P8.64

- 65.** A block of mass 0.500 kg is pushed against a horizontal spring of negligible mass until the spring is compressed a distance x (Fig. P8.65). The force constant of the spring is 450 N/m . When it is released, the block travels along a frictionless, horizontal surface to point **A**, the bottom of a vertical circular track of radius $R = 1.00\text{ m}$, and continues to move up the track. The block's speed at the bottom of the track is $v_{\text{A}} = 12.0\text{ m/s}$, and the block experiences an average friction force of 7.00 N while sliding up the track. (a) What is x ? (b) If the block were to reach the top of the track, what would be its speed at that point? (c) Does the block actually reach the top of the track, or does it fall off before reaching the top?

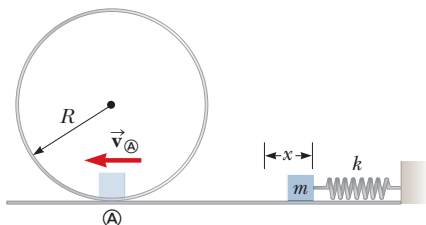


Figure P8.65

- 66. Review.** As a prank, someone has balanced a pumpkin at the highest point of a grain silo. The silo is topped with a hemispherical cap that is frictionless when wet.

The line from the center of curvature of the cap to the pumpkin makes an angle $\theta_i = 0^\circ$ with the vertical. While you happen to be standing nearby in the middle of a rainy night, a breath of wind makes the pumpkin start sliding downward from rest. It loses contact with the cap when the line from the center of the hemisphere to the pumpkin makes a certain angle with the vertical. What is this angle?

- 67. Review.** The mass of a car is $1\,500\text{ kg}$. The shape of the car's body is such that its aerodynamic drag coefficient is $D = 0.330$ and its frontal area is 2.50 m^2 . Assuming the drag force is proportional to v^2 and ignoring other sources of friction, calculate the power required to maintain a speed of 100 km/h as the car climbs a long hill sloping at 3.20° .

- 68.** A pendulum, comprising a light string of length L and a small sphere, swings in the vertical plane. The string hits a peg located a distance d below the point of suspension (Fig. P8.68). (a) Show that if the sphere is released from a height below that of the peg, it will return to this height after the string strikes the peg. (b) Show that if the pendulum is released from rest at the horizontal position ($\theta = 90^\circ$) and is to swing in a complete circle centered on the peg, the minimum value of d must be $3L/5$.

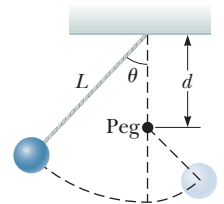


Figure P8.68

- 69.** A block of mass M rests on a table. It is fastened to the lower end of a light, vertical spring. The upper end of the spring is fastened to a block of mass m . The upper block is pushed down by an additional force $3mg$, so the spring compression is $4mg/k$. In this configuration, the upper block is released from rest. The spring lifts the lower block off the table. In terms of m , what is the greatest possible value for M ?

- 70. Review.** Why is the following situation impossible?

An athlete tests her hand strength by having an assistant hang weights from her belt as she hangs onto a horizontal bar with her hands. When the weights hanging on her belt have increased to 80% of her body weight, her hands can no longer support her and she drops to the floor. Frustrated at not meeting her hand-strength goal, she decides to swing on a trapeze. The trapeze consists of a bar suspended by two parallel ropes, each of length ℓ , allowing performers to swing in a vertical circular arc (Fig. P8.70). The athlete holds the bar and steps off an elevated platform, starting from rest with the ropes at an angle $\theta_i = 60.0^\circ$ with respect to the vertical. As she swings several times back and forth in a circular arc, she forgets her frustration related to the hand-strength test. Assume the size of the

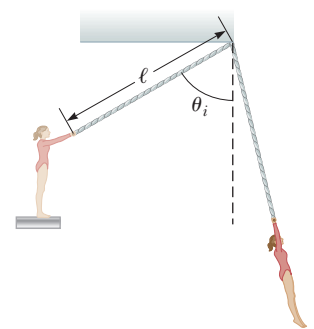


Figure P8.70

performer's body is small compared to the length ℓ and air resistance is negligible.

71. While running, a person transforms about 0.600 J of chemical energy to mechanical energy per step per kilogram of body mass. If a 60.0-kg runner transforms energy at a rate of 70.0 W during a race, how fast is the person running? Assume that a running step is 1.50 m long.
72. A roller-coaster car shown in Figure P8.72 is released from rest from a height h and then moves freely with negligible friction. The roller-coaster track includes a circular loop of radius R in a vertical plane. (a) First suppose the car barely makes it around the loop; at the top of the loop, the riders are upside down and feel weightless. Find the required height h of the release point above the bottom of the loop in terms of R . (b) Now assume the release point is at or above the minimum required height. Show that the normal force on the car at the bottom of the loop exceeds the normal force at the top of the loop by six times the car's weight. The normal force on each rider follows the same rule. Such a large normal force is dangerous and very uncomfortable for the riders. Roller coasters are therefore not built with circular loops in vertical planes. Figure P6.17 (page 170) shows an actual design.

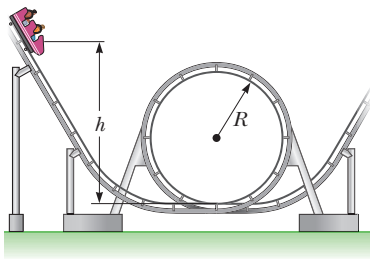


Figure P8.72

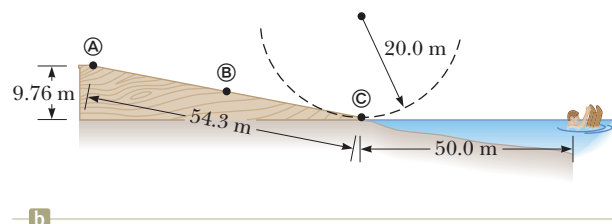
73. A ball whirls around in a *vertical* circle at the end of a string. The other end of the string is fixed at the center of the circle. Assuming the total energy of the ball–Earth system remains constant, show that the tension in the string at the bottom is greater than the tension at the top by six times the ball's weight.
74. An airplane of mass 1.50×10^4 kg is in level flight, initially moving at 60.0 m/s. The resistive force exerted by air on the airplane has a magnitude of 4.0×10^4 N. By Newton's third law, if the engines exert a force on the exhaust gases to expel them out of the back of the engine, the exhaust gases exert a force on the engines in the direction of the airplane's travel. This force is called thrust, and the value of the thrust in this situation is 7.50×10^4 N. (a) Is the work done by the exhaust gases on the airplane during some time interval equal to the change in the airplane's kinetic energy? Explain. (b) Find the speed of the airplane after it has traveled 5.0×10^2 m.
75. Consider the block–spring collision discussed in Example 8.8. (a) For the situation in part (B), in which the surface exerts a friction force on the block, show that the block never arrives back at $x = 0$. (b) What is

the maximum value of the coefficient of friction that would allow the block to return to $x = 0$?

76. In bicycling for aerobic exercise, a woman wants her heart rate to be between 136 and 166 beats per minute. Assume that her heart rate is directly proportional to her mechanical power output within the range relevant here. Ignore all forces on the woman–bicycle system except for static friction forward on the drive wheel of the bicycle and an air resistance force proportional to the square of her speed. When her speed is 22.0 km/h, her heart rate is 90.0 beats per minute. In what range should her speed be so that her heart rate will be in the range she wants?
77. **Review.** In 1887 in Bridgeport, Connecticut, C. J. Belknap built the water slide shown in Figure P8.77. A rider on a small sled, of total mass 80.0 kg, pushed off to start at the top of the slide (point A) with a speed of 2.50 m/s. The chute was 9.76 m high at the top and 54.3 m long. Along its length, 725 small wheels made friction negligible. Upon leaving the chute horizontally at its bottom end (point C), the rider skimmed across the water of Long Island Sound for as much as 50 m, "skipping along like a flat pebble," before at last coming to rest and swimming ashore, pulling his sled after him. (a) Find the speed of the sled and rider at point C. (b) Model the force of water friction as a constant retarding force acting on a particle. Find the magnitude of the friction force the water exerts on the sled. (c) Find the magnitude of the force the chute exerts on the sled at point B. (d) At point C, the chute is horizontal but curving in the vertical plane. Assume its radius of curvature is 20.0 m. Find the force the chute exerts on the sled at point C.



a



b

Figure P8.77

78. In a needle biopsy, a narrow strip of tissue is extracted from a patient using a hollow needle. Rather than being pushed by hand, to ensure a clean cut the needle can be fired into the patient's body by a spring. Assume that the needle has mass 5.60 g, the light spring has

force constant 375 N/m, and the spring is originally compressed 8.10 cm to project the needle horizontally without friction. After the needle leaves the spring, the tip of the needle moves through 2.40 cm of skin and soft tissue, which exerts on it a resistive force of 7.60 N. Next, the needle cuts 3.50 cm into an organ, which exerts on it a backward force of 9.20 N. Find (a) the maximum speed of the needle and (b) the speed at which the flange on the back end of the needle runs into a stop that is set to limit the penetration to 5.90 cm.

Challenge Problems

- 79. Review.** A uniform board of length L is sliding along a smooth, frictionless, horizontal plane as shown in Figure P8.79a. The board then slides across the boundary with a rough horizontal surface. The coefficient of kinetic friction between the board and the second surface is μ_k . (a) Find the acceleration of the board at the moment its front end has traveled a distance x beyond the boundary. (b) The board stops at the moment its back end reaches the boundary as shown in Figure P8.79b. Find the initial speed v of the board.

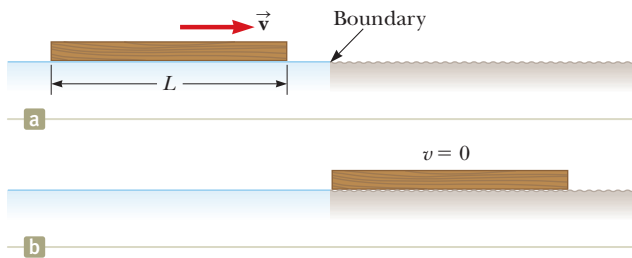


Figure P8.79

- 80.** Starting from rest, a 64.0-kg person bungee jumps from a tethered hot-air balloon 65.0 m above the ground. The bungee cord has negligible mass and unstretched length 25.8 m. One end is tied to the basket of the balloon and the other end to a harness around the person's body. The cord is modeled as a spring that obeys Hooke's law with a spring constant of 81.0 N/m, and the person's body is modeled as a particle. The hot-air balloon does not move. (a) Express the gravitational potential energy of the person–Earth system as a function of the person's variable height y above the ground. (b) Express the elastic potential energy of the cord as a function of y . (c) Express the total potential energy of the person–cord–Earth system as a function of y . (d) Plot a graph of the gravitational, elastic, and total potential energies as functions of y . (e) Assume air resistance is negligible. Determine the minimum height of the person above the ground during his plunge. (f) Does the potential energy graph show any equilibrium position or positions? If so, at what elevations? Are they stable or unstable? (g) Determine the jumper's maximum speed.
- 81.** Jane, whose mass is 50.0 kg, needs to swing across a river (having width D) filled with person-eating crocodiles to save Tarzan from danger. She must swing into

a wind exerting constant horizontal force \vec{F} , on a vine having length L and initially making an angle θ with the vertical (Fig. P8.81). Take $D = 50.0$ m, $F = 110$ N, $L = 40.0$ m, and $\theta = 50.0^\circ$. (a) With what minimum speed must Jane begin her swing to just make it to the other side? (b) Once the rescue is complete, Tarzan and Jane must swing back across the river. With what minimum speed must they begin their swing? Assume Tarzan has a mass of 80.0 kg.

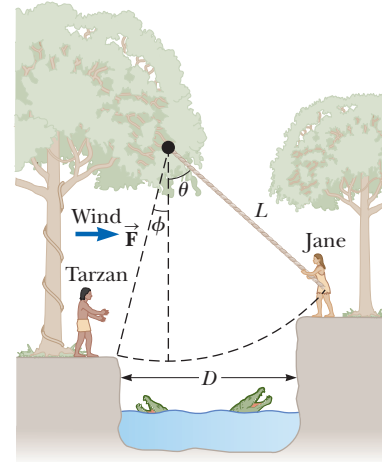


Figure P8.81

- 82.** A ball of mass $m = 300$ g is connected by a strong string of length $L = 80.0$ cm to a pivot and held in place with the string vertical. A wind exerts constant force F to the right on the ball as shown in Figure P8.82. The ball is released from rest. The wind makes it swing up to attain maximum height H above its starting point before it swings down again. (a) Find H as a function of F . Evaluate H for (b) $F = 1.00$ N and (c) $F = 10.0$ N. How does H behave (d) as F approaches zero and (e) as F approaches infinity? (f) Now consider the equilibrium height of the ball with the wind blowing. Determine it as a function of F . Evaluate the equilibrium height for (g) $F = 10$ N and (h) F going to infinity.

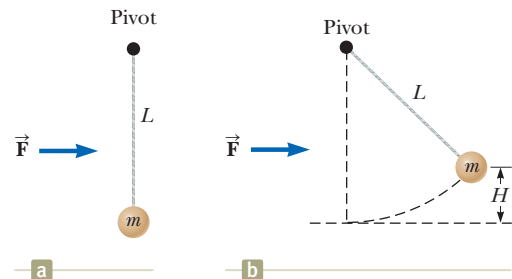


Figure P8.82

- 83. What If?** Consider the roller coaster described in Problem 58. Because of some friction between the coaster and the track, the coaster enters the circular section at a speed of 15.0 m/s rather than the 22.0 m/s in Problem 58. Is this situation *more* or *less* dangerous for the passengers than that in Problem 58? Assume the circular section is still frictionless.

- 84.** A uniform chain of length 8.00 m initially lies stretched out on a horizontal table. (a) Assuming the coefficient of static friction between chain and table is 0.600, show that the chain will begin to slide off the table if at least 3.00 m of it hangs over the edge of the table. (b) Determine the speed of the chain as its last link leaves the table, given that the coefficient of kinetic friction between the chain and the table is 0.400.
- 85.** A daredevil plans to bungee jump from a balloon 65.0 m above the ground. He will use a uniform elastic

cord, tied to a harness around his body, to stop his fall at a point 10.0 m above the ground. Model his body as a particle and the cord as having negligible mass and obeying Hooke's law. In a preliminary test he finds that when hanging at rest from a 5.00-m length of the cord, his body weight stretches it by 1.50 m. He will drop from rest at the point where the top end of a longer section of the cord is attached to the stationary balloon. (a) What length of cord should he use? (b) What maximum acceleration will he experience?

Linear Momentum and Collisions



- 9.1 Linear Momentum
- 9.2 Analysis Model: Isolated System (Momentum)
- 9.3 Analysis Model: Nonisolated System (Momentum)
- 9.4 Collisions in One Dimension
- 9.5 Collisions in Two Dimensions
- 9.6 The Center of Mass
- 9.7 Systems of Many Particles
- 9.8 Deformable Systems
- 9.9 Rocket Propulsion

Consider what happens when two cars collide as in the opening photograph for this chapter. Both cars change their motion from having a very large velocity to being at rest because of the collision. Because each car experiences a large change in velocity over a very short time interval, the average force on it is very large. By Newton's third law, each of the cars experiences a force of the same magnitude. By Newton's second law, the results of those forces on the motion of the car depends on the mass of the car.

One of the main objectives of this chapter is to enable you to understand and analyze such events in a simple way. First, we introduce the concept of *momentum*, which is useful for describing objects in motion. The momentum of an object is related to both its mass and its velocity. The concept of momentum leads us to a second conservation law, that of conservation of momentum. In turn, we identify new momentum versions of analysis models for isolated and nonisolated system. These models are especially useful for treating problems that involve collisions between objects and for analyzing rocket propulsion. This chapter also introduces the concept of the center of mass of a system of particles. We find that the motion of a system of particles can be described by the motion of one particle located at the center of mass that represents the entire system.

9.1 Linear Momentum

In Chapter 8, we studied situations that are difficult to analyze with Newton's laws. We were able to solve problems involving these situations by identifying a system and

The concept of momentum allows the analysis of car collisions even without detailed knowledge of the forces involved. Such analysis can determine the relative velocity of the cars before the collision, and in addition aid engineers in designing safer vehicles. (The English translation of the German text on the side of the trailer in the background is: "Pit stop for your vehicle.") (AP Photos/Keystone/Regina Kuehne)

applying a conservation principle, conservation of energy. Let us consider another situation and see if we can solve it with the models we have developed so far:

A 60-kg archer stands at rest on frictionless ice and fires a 0.030-kg arrow horizontally at 85 m/s. With what velocity does the archer move across the ice after firing the arrow?

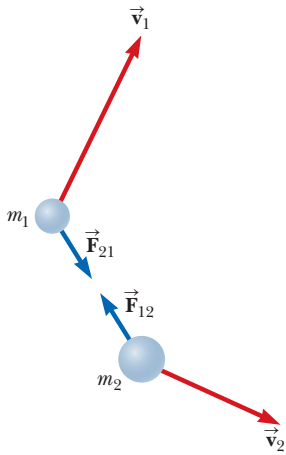


Figure 9.1 Two particles interact with each other. According to Newton's third law, we must have $\vec{\mathbf{F}}_{12} = -\vec{\mathbf{F}}_{21}$.

From Newton's third law, we know that the force that the bow exerts on the arrow is paired with a force in the opposite direction on the bow (and the archer). This force causes the archer to slide backward on the ice with the speed requested in the problem. We cannot determine this speed using motion models such as the particle under constant acceleration because we don't have any information about the acceleration of the archer. We cannot use force models such as the particle under a net force because we don't know anything about forces in this situation. Energy models are of no help because we know nothing about the work done in pulling the bowstring back or the elastic potential energy in the system related to the taut bowstring.

Despite our inability to solve the archer problem using models learned so far, this problem is very simple to solve if we introduce a new quantity that describes motion, *linear momentum*. To generate this new quantity, consider an isolated system of two particles (Fig. 9.1) with masses m_1 and m_2 moving with velocities $\vec{\mathbf{v}}_1$ and $\vec{\mathbf{v}}_2$ at an instant of time. Because the system is isolated, the only force on one particle is that from the other particle. If a force from particle 1 (for example, a gravitational force) acts on particle 2, there must be a second force—equal in magnitude but opposite in direction—that particle 2 exerts on particle 1. That is, the forces on the particles form a Newton's third law action–reaction pair, and $\vec{\mathbf{F}}_{12} = -\vec{\mathbf{F}}_{21}$. We can express this condition as

$$\vec{\mathbf{F}}_{21} + \vec{\mathbf{F}}_{12} = 0$$

From a system point of view, this equation says that if we add up the forces on the particles in an isolated system, the sum is zero.

Let us further analyze this situation by incorporating Newton's second law. At the instant shown in Figure 9.1, the interacting particles in the system have accelerations corresponding to the forces on them. Therefore, replacing the force on each particle with $m\vec{\mathbf{a}}$ for the particle gives

$$m_1\vec{\mathbf{a}}_1 + m_2\vec{\mathbf{a}}_2 = 0$$

Now we replace each acceleration with its definition from Equation 4.5:

$$m_1 \frac{d\vec{\mathbf{v}}_1}{dt} + m_2 \frac{d\vec{\mathbf{v}}_2}{dt} = 0$$

If the masses m_1 and m_2 are constant, we can bring them inside the derivative operation, which gives

$$\begin{aligned} \frac{d(m_1\vec{\mathbf{v}}_1)}{dt} + \frac{d(m_2\vec{\mathbf{v}}_2)}{dt} &= 0 \\ \frac{d}{dt}(m_1\vec{\mathbf{v}}_1 + m_2\vec{\mathbf{v}}_2) &= 0 \end{aligned} \quad (9.1)$$

Notice that the derivative of the sum $m_1\vec{\mathbf{v}}_1 + m_2\vec{\mathbf{v}}_2$ with respect to time is zero. Consequently, this sum must be constant. We learn from this discussion that the quantity $m\vec{\mathbf{v}}$ for a particle is important in that the sum of these quantities for an isolated system of particles is conserved. We call this quantity *linear momentum*:

Definition of linear momentum of a particle ▶

The **linear momentum** of a particle or an object that can be modeled as a particle of mass m moving with a velocity $\vec{\mathbf{v}}$ is defined to be the product of the mass and velocity of the particle:

$$\vec{\mathbf{p}} \equiv m\vec{\mathbf{v}} \quad (9.2)$$

Linear momentum is a vector quantity because it equals the product of a scalar quantity m and a vector quantity \vec{v} . Its direction is along \vec{v} , it has dimensions ML/T, and its SI unit is $\text{kg} \cdot \text{m/s}$.

If a particle is moving in an arbitrary direction, \vec{p} has three components, and Equation 9.2 is equivalent to the component equations

$$p_x = mv_x \quad p_y = mv_y \quad p_z = mv_z$$

As you can see from its definition, the concept of momentum¹ provides a quantitative distinction between heavy and light particles moving at the same velocity. For example, the momentum of a bowling ball is much greater than that of a tennis ball moving at the same speed. Newton called the product $m\vec{v}$ *quantity of motion*; this term is perhaps a more graphic description than our present-day word *momentum*, which comes from the Latin word for movement.

We have seen another quantity, kinetic energy, that is a combination of mass and speed. It would be a legitimate question to ask why we need another quantity, momentum, based on mass and velocity. There are clear differences between kinetic energy and momentum. First, kinetic energy is a scalar, whereas momentum is a vector. Consider a system of two equal-mass particles heading toward each other along a line with equal speeds. There is kinetic energy associated with this system because members of the system are moving. Because of the vector nature of momentum, however, the momentum of this system is zero. A second major difference is that kinetic energy can transform to other types of energy, such as potential energy or internal energy. There is only one type of linear momentum, so we see no such transformations when using a momentum approach to a problem. These differences are sufficient to make models based on momentum separate from those based on energy, providing an independent tool to use in solving problems.

Using Newton's second law of motion, we can relate the linear momentum of a particle to the resultant force acting on the particle. We start with Newton's second law and substitute the definition of acceleration:

$$\sum \vec{F} = m\vec{a} = m \frac{d\vec{v}}{dt}$$

In Newton's second law, the mass m is assumed to be constant. Therefore, we can bring m inside the derivative operation to give us

$$\sum \vec{F} = \frac{d(m\vec{v})}{dt} = \frac{d\vec{p}}{dt} \quad (9.3)$$

◀ Newton's second law for a particle

This equation shows that **the time rate of change of the linear momentum of a particle is equal to the net force acting on the particle**. In Chapter 5, we identified force as that which causes a change in the motion of an object (Section 5.2). In Newton's second law (Eq. 5.2), we used acceleration \vec{a} to represent the change in motion. We see now in Equation 9.3 that we can use the derivative of momentum \vec{p} with respect to time to represent the change in motion.

This alternative form of Newton's second law is the form in which Newton presented the law, and it is actually more general than the form introduced in Chapter 5. In addition to situations in which the velocity vector varies with time, we can use Equation 9.3 to study phenomena in which the mass changes. For example, the mass of a rocket changes as fuel is burned and ejected from the rocket. We cannot use $\sum \vec{F} = m\vec{a}$ to analyze rocket propulsion; we must use a momentum approach, as we will show in Section 9.9.

¹In this chapter, the terms *momentum* and *linear momentum* have the same meaning. Later, in Chapter 11, we shall use the term *angular momentum* for a different quantity when dealing with rotational motion.

Quick Quiz 9.1 Two objects have equal kinetic energies. How do the magnitudes of their momenta compare? (a) $p_1 < p_2$ (b) $p_1 = p_2$ (c) $p_1 > p_2$ (d) not enough information to tell

Quick Quiz 9.2 Your physical education teacher throws a baseball to you at a certain speed and you catch it. The teacher is next going to throw you a medicine ball whose mass is ten times the mass of the baseball. You are given the following choices: You can have the medicine ball thrown with (a) the same speed as the baseball, (b) the same momentum, or (c) the same kinetic energy. Rank these choices from easiest to hardest to catch.

Pitfall Prevention 9.1

Momentum of an Isolated System Is Conserved Although the momentum of an isolated *system* is conserved, the momentum of one *particle* within an isolated system is not necessarily conserved because other particles in the system may be interacting with it. Avoid applying conservation of momentum to a single particle.

9.2 Analysis Model: Isolated System (Momentum)

Using the definition of momentum, Equation 9.1 can be written

$$\frac{d}{dt}(\vec{p}_1 + \vec{p}_2) = 0$$

Because the time derivative of the total momentum $\vec{p}_{\text{tot}} = \vec{p}_1 + \vec{p}_2$ is *zero*, we conclude that the *total* momentum of the isolated system of the two particles in Figure 9.1 must remain constant:

$$\vec{p}_{\text{tot}} = \text{constant} \quad (9.4)$$

or, equivalently, over some time interval,

$$\Delta\vec{p}_{\text{tot}} = 0 \quad (9.5)$$

Equation 9.5 can be written as

$$\vec{p}_{1i} + \vec{p}_{2i} = \vec{p}_{1f} + \vec{p}_{2f}$$

where \vec{p}_{1i} and \vec{p}_{2i} are the initial values and \vec{p}_{1f} and \vec{p}_{2f} are the final values of the momenta for the two particles for the time interval during which the particles interact. This equation in component form demonstrates that the total momenta in the x , y , and z directions are all independently conserved:

$$p_{1ix} + p_{2ix} = p_{1fx} + p_{2fx} \quad p_{1iy} + p_{2iy} = p_{1fy} + p_{2fy} \quad p_{1iz} + p_{2iz} = p_{1fz} + p_{2fz} \quad (9.6)$$

Equation 9.5 is the mathematical statement of a new analysis model, the **isolated system (momentum)**. It can be extended to any number of particles in an isolated system as we show in Section 9.7. We studied the energy version of the isolated system model in Chapter 8 ($\Delta E_{\text{system}} = 0$) and now we have a momentum version. In general, Equation 9.5 can be stated in words as follows:

Whenever two or more particles in an isolated system interact, the total momentum of the system does not change.

The momentum version of the isolated system model ►

This statement tells us that the total momentum of an isolated system at all times equals its initial momentum.

Notice that we have made no statement concerning the type of forces acting on the particles of the system. Furthermore, we have not specified whether the forces are conservative or nonconservative. We have also not indicated whether or not the forces are constant. The only requirement is that the forces must be *internal* to the system. This single requirement should give you a hint about the power of this new model.

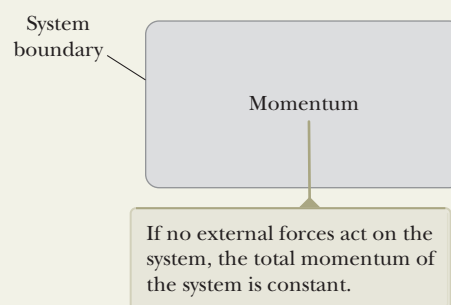
Analysis Model Isolated System (Momentum)

Imagine you have identified a system to be analyzed and have defined a system boundary. If there are no external forces on the system, the system is *isolated*. In that case, the total momentum of the system, which is the vector sum of the momenta of all members of the system, is conserved:

$$\Delta \vec{p}_{\text{tot}} = 0 \quad (9.5)$$

Examples:

- a cue ball strikes another ball on a pool table
- a spacecraft fires its rockets and moves faster through space
- molecules in a gas at a specific temperature move about and strike each other (Chapter 21)
- an incoming particle strikes a nucleus, creating a new nucleus and a different outgoing particle (Chapter 44)
- an electron and a positron annihilate to form two outgoing photons (Chapter 46)



Example 9.1 The Archer AM

Let us consider the situation proposed at the beginning of Section 9.1. A 60-kg archer stands at rest on frictionless ice and fires a 0.030-kg arrow horizontally at 85 m/s (Fig. 9.2). With what velocity does the archer move across the ice after firing the arrow?

SOLUTION

Conceptualize You may have conceptualized this problem already when it was introduced at the beginning of Section 9.1. Imagine the arrow being fired one way and the archer recoiling in the opposite direction.

Categorize As discussed in Section 9.1, we cannot solve this problem with models based on motion, force, or energy. Nonetheless, we *can* solve this problem very easily with an approach involving momentum.

Let us take the system to consist of the archer (including the bow) and the arrow. The system is not isolated because the gravitational force and the normal force from the ice act on the system. These forces, however, are vertical and perpendicular to the motion of the system. There are no external forces in the horizontal direction, and we can apply the *isolated system (momentum)* model in terms of momentum components in this direction.

Analyze The total horizontal momentum of the system before the arrow is fired is zero because nothing in the system is moving. Therefore, the total horizontal momentum of the system after the arrow is fired must also be zero. We choose the direction of firing of the arrow as the positive x direction. Identifying the archer as particle 1 and the arrow as particle 2, we have $m_1 = 60$ kg, $m_2 = 0.030$ kg, and $\vec{v}_{2f} = 85 \hat{i}$ m/s.

Using the isolated system (momentum) model, $\Delta \vec{p} = 0 \rightarrow \vec{p}_f - \vec{p}_i = 0 \rightarrow \vec{p}_f = \vec{p}_i \rightarrow m_1 \vec{v}_{1f} + m_2 \vec{v}_{2f} = 0$ begin with Equation 9.5:

Solve this equation for \vec{v}_{1f} and substitute numerical values:

$$\vec{v}_{1f} = -\frac{m_2}{m_1} \vec{v}_{2f} = -\left(\frac{0.030 \text{ kg}}{60 \text{ kg}}\right)(85 \hat{i} \text{ m/s}) = -0.042 \hat{i} \text{ m/s}$$

Finalize The negative sign for \vec{v}_{1f} indicates that the archer is moving to the left in Figure 9.2 after the arrow is fired, in the direction opposite the direction of motion of the arrow, in accordance with Newton's third law. Because the archer

continued




Figure 9.2 (Example 9.1) An archer fires an arrow horizontally to the right. Because he is standing on frictionless ice, he will begin to slide to the left across the ice.

9.1 continued

is much more massive than the arrow, his acceleration and consequent velocity are much smaller than the acceleration and velocity of the arrow. Notice that this problem sounds very simple, but we could not solve it with models based on motion, force, or energy. Our new momentum model, however, shows us that it not only *sounds* simple, it *is* simple!

WHAT IF? What if the arrow were fired in a direction that makes an angle θ with the horizontal? How will that change the recoil velocity of the archer?

Answer The recoil velocity should decrease in magnitude because only a component of the velocity of the arrow is in the x direction. Conservation of momentum in the x direction gives

$$m_1 v_{1f} + m_2 v_{2f} \cos \theta = 0$$

leading to

$$v_{1f} = -\frac{m_2}{m_1} v_{2f} \cos \theta$$

For $\theta = 0$, $\cos \theta = 1$ and the final velocity of the archer reduces to the value when the arrow is fired horizontally. For nonzero values of θ , the cosine function is less than 1 and the recoil velocity is less than the value calculated for $\theta = 0$. If $\theta = 90^\circ$, then $\cos \theta = 0$ and $v_{1f} = 0$, so there is no recoil velocity. In this case, the archer is simply pushed downward harder against the ice as the arrow is fired.

Example 9.2

Can We Really Ignore the Kinetic Energy of the Earth? **AM**

In Section 7.6, we claimed that we can ignore the kinetic energy of the Earth when considering the energy of a system consisting of the Earth and a dropped ball. Verify this claim.

SOLUTION

Conceptualize Imagine dropping a ball at the surface of the Earth. From your point of view, the ball falls while the Earth remains stationary. By Newton's third law, however, the Earth experiences an upward force and therefore an upward acceleration while the ball falls. In the calculation below, we will show that this motion is extremely small and can be ignored.

Categorize We identify the system as the ball and the Earth. We assume there are no forces on the system from outer space, so the system is isolated. Let's use the *momentum* version of the *isolated system* model.

Analyze We begin by setting up a ratio of the kinetic energy of the Earth to that of the ball. We identify v_E and v_b as the speeds of the Earth and the ball, respectively, after the ball has fallen through some distance.

Use the definition of kinetic energy to set up this ratio:

$$(1) \quad \frac{K_E}{K_b} = \frac{\frac{1}{2} m_E v_E^2}{\frac{1}{2} m_b v_b^2} = \left(\frac{m_E}{m_b} \right) \left(\frac{v_E}{v_b} \right)^2$$

Apply the isolated system (momentum) model, recognizing that the initial momentum of the system is zero:

$$\Delta \vec{p} = 0 \rightarrow p_i = p_f \rightarrow 0 = m_b v_b + m_E v_E$$

Solve the equation for the ratio of speeds:

$$\frac{v_E}{v_b} = -\frac{m_b}{m_E}$$

Substitute this expression for v_E/v_b in Equation (1):

$$\frac{K_E}{K_b} = \left(\frac{m_E}{m_b} \right) \left(-\frac{m_b}{m_E} \right)^2 = \frac{m_b}{m_E}$$

Substitute order-of-magnitude numbers for the masses:

$$\frac{K_E}{K_b} = \frac{m_b}{m_E} \sim \frac{1 \text{ kg}}{10^{25} \text{ kg}} \sim 10^{-25}$$

Finalize The kinetic energy of the Earth is a very small fraction of the kinetic energy of the ball, so we are justified in ignoring it in the kinetic energy of the system.

9.3 Analysis Model: Nonisolated System (Momentum)

According to Equation 9.3, the momentum of a particle changes if a net force acts on the particle. The same can be said about a net force applied to a system as we

will show explicitly in Section 9.7: the momentum of a system changes if a net force from the environment acts on the system. This may sound similar to our discussion of energy in Chapter 8: the energy of a system changes if energy crosses the boundary of the system to or from the environment. In this section, we consider a *nonisolated system*. For energy considerations, a system is nonisolated if energy transfers across the boundary of the system by any of the means listed in Section 8.1. For momentum considerations, a system is nonisolated if a net force acts on the system for a time interval. In this case, we can imagine momentum being transferred to the system from the environment by means of the net force. Knowing the change in momentum caused by a force is useful in solving some types of problems. To build a better understanding of this important concept, let us assume a net force $\sum \vec{\mathbf{F}}$ acts on a particle and this force may vary with time. According to Newton's second law, in the form expressed in Equation 9.3, $\sum \vec{\mathbf{F}} = d\vec{\mathbf{p}}/dt$, we can write

$$d\vec{\mathbf{p}} = \sum \vec{\mathbf{F}} dt \quad (9.7)$$

We can integrate² this expression to find the change in the momentum of a particle when the force acts over some time interval. If the momentum of the particle changes from $\vec{\mathbf{p}}_i$ at time t_i to $\vec{\mathbf{p}}_f$ at time t_f , integrating Equation 9.7 gives

$$\Delta\vec{\mathbf{p}} = \vec{\mathbf{p}}_f - \vec{\mathbf{p}}_i = \int_{t_i}^{t_f} \sum \vec{\mathbf{F}} dt \quad (9.8)$$

To evaluate the integral, we need to know how the net force varies with time. The quantity on the right side of this equation is a vector called the **impulse** of the net force $\sum \vec{\mathbf{F}}$ acting on a particle over the time interval $\Delta t = t_f - t_i$:

$$\vec{\mathbf{I}} \equiv \int_{t_i}^{t_f} \sum \vec{\mathbf{F}} dt \quad (9.9)$$

◀ Impulse of a force

From its definition, we see that impulse $\vec{\mathbf{I}}$ is a vector quantity having a magnitude equal to the area under the force–time curve as described in Figure 9.3a. It is assumed the force varies in time in the general manner shown in the figure and is nonzero in the time interval $\Delta t = t_f - t_i$. The direction of the impulse vector is the same as the direction of the change in momentum. Impulse has the dimensions of momentum, that is, ML/T. Impulse is *not* a property of a particle; rather, it is a measure of the degree to which an external force changes the particle's momentum.

Because the net force imparting an impulse to a particle can generally vary in time, it is convenient to define a time-averaged net force:

$$(\sum \vec{\mathbf{F}})_{\text{avg}} \equiv \frac{1}{\Delta t} \int_{t_i}^{t_f} \sum \vec{\mathbf{F}} dt \quad (9.10)$$

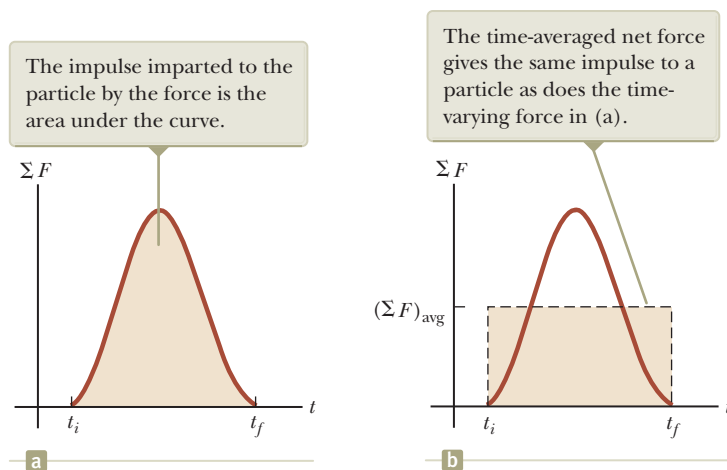


Figure 9.3 (a) A net force acting on a particle may vary in time. (b) The value of the constant force $(\sum F)_{\text{avg}}$ (horizontal dashed line) is chosen so that the area $(\sum F)_{\text{avg}} \Delta t$ of the rectangle is the same as the area under the curve in (a).

²Here we are integrating force with respect to time. Compare this strategy with our efforts in Chapter 7, where we integrated force with respect to position to find the work done by the force.

where $\Delta t = t_f - t_i$. (This equation is an application of the mean value theorem of calculus.) Therefore, we can express Equation 9.9 as

$$\vec{\mathbf{I}} = (\sum \vec{\mathbf{F}})_{\text{avg}} \Delta t \quad (9.11)$$

This time-averaged force, shown in Figure 9.3b, can be interpreted as the constant force that would give to the particle in the time interval Δt the same impulse that the time-varying force gives over this same interval.

In principle, if $\sum \vec{\mathbf{F}}$ is known as a function of time, the impulse can be calculated from Equation 9.9. The calculation becomes especially simple if the force acting on the particle is constant. In this case, $(\sum \vec{\mathbf{F}})_{\text{avg}} = \sum \vec{\mathbf{F}}$, where $\sum \vec{\mathbf{F}}$ is the constant net force, and Equation 9.11 becomes

$$\vec{\mathbf{I}} = \sum \vec{\mathbf{F}} \Delta t \quad (9.12)$$

Combining Equations 9.8 and 9.9 gives us an important statement known as the **impulse–momentum theorem**:

Impulse–momentum theorem ▶
for a particle

The change in the momentum of a particle is equal to the impulse of the net force acting on the particle:

$$\Delta \vec{\mathbf{p}} = \vec{\mathbf{I}} \quad (9.13)$$

This statement is equivalent to Newton's second law. When we say that an impulse is given to a particle, we mean that momentum is transferred from an external agent to that particle. Equation 9.13 is identical in form to the conservation of energy equation, Equation 8.1, and its full expansion, Equation 8.2. Equation 9.13 is the most general statement of the principle of **conservation of momentum** and is called the **conservation of momentum equation**. In the case of a momentum approach, isolated systems tend to appear in problems more often than nonisolated systems, so, in practice, the conservation of momentum equation is often identified as the special case of Equation 9.5.

The left side of Equation 9.13 represents the change in the momentum of the system, which in this case is a single particle. The right side is a measure of how much momentum crosses the boundary of the system due to the net force being applied to the system. Equation 9.13 is the mathematical statement of a new analysis model, the **nonisolated system (momentum)** model. Although this equation is similar in form to Equation 8.1, there are several differences in its application to problems. First, Equation 9.13 is a vector equation, whereas Equation 8.1 is a scalar equation. Therefore, directions are important for Equation 9.13. Second, there is only one type of momentum and therefore only one way to store momentum in a system. In contrast, as we see from Equation 8.2, there are three ways to store energy in a system: kinetic, potential, and internal. Third, there is only one way to transfer momentum into a system: by the application of a force on the system over a time interval. Equation 8.2 shows six ways we have identified as transferring energy into a system. Therefore, there is no expansion of Equation 9.13 analogous to Equation 8.2.

In many physical situations, we shall use what is called the **impulse approximation**, in which we assume one of the forces exerted on a particle acts for a short time but is much greater than any other force present. In this case, the net force $\sum \vec{\mathbf{F}}$ in Equation 9.9 is replaced with a single force $\vec{\mathbf{F}}$ to find the impulse on the particle. This approximation is especially useful in treating collisions in which the duration of the collision is very short. When this approximation is made, the single force is referred to as an *impulsive force*. For example, when a baseball is struck with a bat, the time of the collision is about 0.01 s and the average force that the bat exerts on the ball in this time is typically several thousand newtons. Because this contact force is much greater than the magnitude of the gravitational force, the impulse approximation justifies our ignoring the gravitational forces exerted on



© David Woods/CORBIS

Air bags in automobiles have saved countless lives in accidents. The air bag increases the time interval during which the passenger is brought to rest, thereby decreasing the force on (and resultant injury to) the passenger.

the ball and bat during the collision. When we use this approximation, it is important to remember that \vec{p}_i and \vec{p}_f represent the momenta *immediately* before and after the collision, respectively. Therefore, in any situation in which it is proper to use the impulse approximation, the particle moves very little during the collision.

Quick Quiz 9.3 Two objects are at rest on a frictionless surface. Object 1 has a greater mass than object 2. (i) When a constant force is applied to object 1, it accelerates through a distance d in a straight line. The force is removed from object 1 and is applied to object 2. At the moment when object 2 has accelerated through the same distance d , which statements are true? (a) $p_1 < p_2$ (b) $p_1 = p_2$ (c) $p_1 > p_2$ (d) $K_1 < K_2$ (e) $K_1 = K_2$ (f) $K_1 > K_2$ (ii) When a force is applied to object 1, it accelerates for a time interval Δt . The force is removed from object 1 and is applied to object 2. From the same list of choices, which statements are true after object 2 has accelerated for the same time interval Δt ?

Quick Quiz 9.4 Rank an automobile dashboard, seat belt, and air bag, each used alone in separate collisions from the same speed, in terms of (a) the impulse and (b) the average force each delivers to a front-seat passenger, from greatest to least.

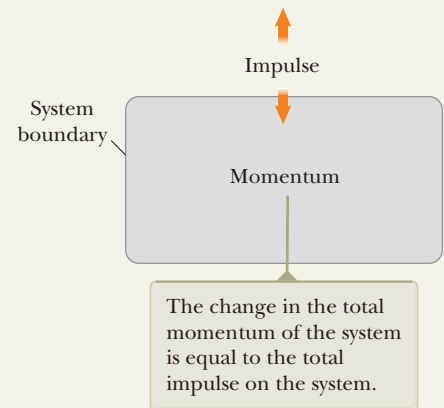
Analysis Model Nonisolated System (Momentum)

Imagine you have identified a system to be analyzed and have defined a system boundary. If external forces are applied on the system, the system is *nonisolated*. In that case, the change in the total momentum of the system is equal to the impulse on the system, a statement known as the **impulse–momentum theorem**:

$$\Delta\vec{p} = \vec{I} \quad (9.13)$$

Examples:

- a baseball is struck by a bat
- a spool sitting on a table is pulled by a string (Example 10.14 in Chapter 10)
- a gas molecule strikes the wall of the container holding the gas (Chapter 21)
- photons strike an absorbing surface and exert pressure on the surface (Chapter 34)



Example 9.3 How Good Are the Bumpers?

AM

In a particular crash test, a car of mass 1 500 kg collides with a wall as shown in Figure 9.4. The initial and final velocities of the car are $\vec{v}_i = -15.0\hat{i}$ m/s and $\vec{v}_f = 2.60\hat{i}$ m/s, respectively. If the collision lasts 0.150 s, find the impulse caused by the collision and the average net force exerted on the car.

SOLUTION

Conceptualize The collision time is short, so we can imagine the car being brought to rest very rapidly and then moving back in the opposite direction with a reduced speed.

Categorize Let us assume the net force exerted on the car by the wall and friction from the ground is large compared with other forces on the car (such as




Figure 9.4 (Example 9.3) (a) This car's momentum changes as a result of its collision with the wall. (b) In a crash test, much of the car's initial kinetic energy is transformed into energy associated with the damage to the car.

continued

9.3 continued

air resistance). Furthermore, the gravitational force and the normal force exerted by the road on the car are perpendicular to the motion and therefore do not affect the horizontal momentum. Therefore, we categorize the problem as one in which we can apply the impulse approximation in the horizontal direction. We also see that the car's momentum changes due to an impulse from the environment. Therefore, we can apply the *nonisolated system (momentum)* model.

Analyze

Use Equation 9.13 to find the impulse on the car:

$$\begin{aligned}\vec{\mathbf{I}} &= \Delta\vec{\mathbf{p}} = \vec{\mathbf{p}}_f - \vec{\mathbf{p}}_i = m\vec{\mathbf{v}}_f - m\vec{\mathbf{v}}_i = m(\vec{\mathbf{v}}_f - \vec{\mathbf{v}}_i) \\ &= (1\,500\text{ kg})[2.60\hat{\mathbf{i}}\text{ m/s} - (-15.0\hat{\mathbf{i}}\text{ m/s})] = 2.64 \times 10^4\hat{\mathbf{i}}\text{ kg}\cdot\text{m/s}\end{aligned}$$

Use Equation 9.11 to evaluate the average net force exerted on the car:

$$\left(\sum \vec{\mathbf{F}}\right)_{\text{avg}} = \frac{\vec{\mathbf{I}}}{\Delta t} = \frac{2.64 \times 10^4\hat{\mathbf{i}}\text{ kg}\cdot\text{m/s}}{0.150\text{ s}} = 1.76 \times 10^5\hat{\mathbf{i}}\text{ N}$$

Finalize The net force found above is a combination of the normal force on the car from the wall and any friction force between the tires and the ground as the front of the car crumples. If the brakes are not operating while the crash occurs and the crumpling metal does not interfere with the free rotation of the tires, this friction force could be relatively small due to the freely rotating wheels. Notice that the signs of the velocities in this example indicate the reversal of directions. What would the mathematics be describing if both the initial and final velocities had the same sign?

WHAT IF? What if the car did not rebound from the wall? Suppose the final velocity of the car is zero and the time interval of the collision remains at 0.150 s. Would that represent a larger or a smaller net force on the car?

Answer In the original situation in which the car rebounds, the net force on the car does two things during the time interval: (1) it stops the car, and (2) it causes the car to move away from the wall at 2.60 m/s after the collision. If the car does not rebound, the net force is only doing the first of these steps—stopping the car—which requires a *smaller* force.

Mathematically, in the case of the car that does not rebound, the impulse is

$$\vec{\mathbf{I}} = \Delta\vec{\mathbf{p}} = \vec{\mathbf{p}}_f - \vec{\mathbf{p}}_i = 0 - (1\,500\text{ kg})(-15.0\hat{\mathbf{i}}\text{ m/s}) = 2.25 \times 10^4\hat{\mathbf{i}}\text{ kg}\cdot\text{m/s}$$

The average net force exerted on the car is

$$\left(\sum \vec{\mathbf{F}}\right)_{\text{avg}} = \frac{\vec{\mathbf{I}}}{\Delta t} = \frac{2.25 \times 10^4\hat{\mathbf{i}}\text{ kg}\cdot\text{m/s}}{0.150\text{ s}} = 1.50 \times 10^5\hat{\mathbf{i}}\text{ N}$$

which is indeed smaller than the previously calculated value, as was argued conceptually.

9.4 Collisions in One Dimension

In this section, we use the isolated system (momentum) model to describe what happens when two particles collide. The term **collision** represents an event during which two particles come close to each other and interact by means of forces. The interaction forces are assumed to be much greater than any external forces present, so we can use the impulse approximation.

A collision may involve physical contact between two macroscopic objects as described in Figure 9.5a, but the notion of what is meant by a collision must be generalized because “physical contact” on a submicroscopic scale is ill-defined and hence meaningless. To understand this concept, consider a collision on an atomic scale (Fig. 9.5b) such as the collision of a proton with an alpha particle (the nucleus of a helium atom). Because the particles are both positively charged, they repel each other due to the strong electrostatic force between them at close separations and never come into “physical contact.”

When two particles of masses m_1 and m_2 collide as shown in Figure 9.5, the impulsive forces may vary in time in complicated ways, such as that shown in Figure 9.3. Regardless of the complexity of the time behavior of the impulsive force, however, this force is internal to the system of two particles. Therefore, the two particles form an isolated system and the momentum of the system must be conserved in *any* collision.

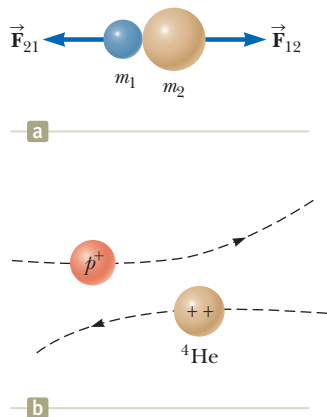


Figure 9.5 (a) The collision between two objects as the result of direct contact. (b) The “collision” between two charged particles.

In contrast, the total kinetic energy of the system of particles may or may not be conserved, depending on the type of collision. In fact, collisions are categorized as being either *elastic* or *inelastic* depending on whether or not kinetic energy is conserved.

An **elastic collision** between two objects is one in which the total kinetic energy (as well as total momentum) of the system is the same before and after the collision. Collisions between certain objects in the macroscopic world, such as billiard balls, are only *approximately* elastic because some deformation and loss of kinetic energy take place. For example, you can hear a billiard ball collision, so you know that some of the energy is being transferred away from the system by sound. An elastic collision must be perfectly silent! *Truly* elastic collisions occur between atomic and subatomic particles. These collisions are described by the isolated system model for both energy and momentum. Furthermore, there must be no transformation of kinetic energy into other types of energy within the system.

An **inelastic collision** is one in which the total kinetic energy of the system is not the same before and after the collision (even though the momentum of the system is conserved). Inelastic collisions are of two types. When the objects stick together after they collide, as happens when a meteorite collides with the Earth, the collision is called **perfectly inelastic**. When the colliding objects do not stick together but some kinetic energy is transformed or transferred away, as in the case of a rubber ball colliding with a hard surface, the collision is called **inelastic** (with no modifying adverb). When the rubber ball collides with the hard surface, some of the ball's kinetic energy is transformed when the ball is deformed while it is in contact with the surface. Inelastic collisions are described by the momentum version of the isolated system model. The system could be isolated for energy, with kinetic energy transformed to potential or internal energy. If the system is nonisolated, there could be energy leaving the system by some means. In this latter case, there could also be some transformation of energy within the system. In either of these cases, the kinetic energy of the system changes.

In the remainder of this section, we investigate the mathematical details for collisions in one dimension and consider the two extreme cases, perfectly inelastic and elastic collisions.

Perfectly Inelastic Collisions

Consider two particles of masses m_1 and m_2 moving with initial velocities \vec{v}_{1i} and \vec{v}_{2i} along the same straight line as shown in Figure 9.6. The two particles collide head-on, stick together, and then move with some common velocity \vec{v}_f after the collision. Because the momentum of an isolated system is conserved in *any* collision, we can say that the total momentum before the collision equals the total momentum of the composite system after the collision:

$$\Delta\vec{p} = 0 \rightarrow \vec{p}_i = \vec{p}_f \rightarrow m_1\vec{v}_{1i} + m_2\vec{v}_{2i} = (m_1 + m_2)\vec{v}_f \quad (9.14)$$

Solving for the final velocity gives

$$\vec{v}_f = \frac{m_1\vec{v}_{1i} + m_2\vec{v}_{2i}}{m_1 + m_2} \quad (9.15)$$

Elastic Collisions

Consider two particles of masses m_1 and m_2 moving with initial velocities \vec{v}_{1i} and \vec{v}_{2i} along the same straight line as shown in Figure 9.7 on page 258. The two particles collide head-on and then leave the collision site with different velocities, \vec{v}_{1f} and \vec{v}_{2f} . In an elastic collision, both the momentum and kinetic energy of the system are conserved. Therefore, considering velocities along the horizontal direction in Figure 9.7, we have

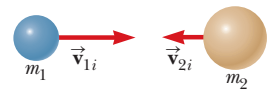
$$p_i = p_f \rightarrow m_1v_{1i} + m_2v_{2i} = m_1v_{1f} + m_2v_{2f} \quad (9.16)$$

$$K_i = K_f \rightarrow \frac{1}{2}m_1v_{1i}^2 + \frac{1}{2}m_2v_{2i}^2 = \frac{1}{2}m_1v_{1f}^2 + \frac{1}{2}m_2v_{2f}^2 \quad (9.17)$$

Pitfall Prevention 9.2

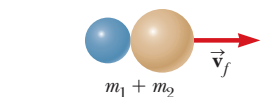
Inelastic Collisions Generally, inelastic collisions are hard to analyze without additional information. Lack of this information appears in the mathematical representation as having more unknowns than equations.

Before the collision, the particles move separately.



a

After the collision, the particles move together.



b

Figure 9.6 Schematic representation of a perfectly inelastic head-on collision between two particles.

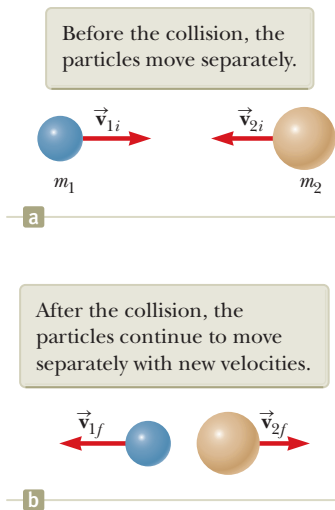


Figure 9.7 Schematic representation of an elastic head-on collision between two particles.

Pitfall Prevention 9.3

Not a General Equation Equation 9.20 can only be used in a very *specific* situation, a one-dimensional, elastic collision between two objects. The *general* concept is conservation of momentum (and conservation of kinetic energy if the collision is elastic) for an isolated system.

Because all velocities in Figure 9.7 are either to the left or the right, they can be represented by the corresponding speeds along with algebraic signs indicating direction. We shall indicate v as positive if a particle moves to the right and negative if it moves to the left.

In a typical problem involving elastic collisions, there are two unknown quantities, and Equations 9.16 and 9.17 can be solved simultaneously to find them. An alternative approach, however—one that involves a little mathematical manipulation of Equation 9.17—often simplifies this process. To see how, let us cancel the factor $\frac{1}{2}$ in Equation 9.17 and rewrite it by gathering terms with subscript 1 on the left and 2 on the right:

$$m_1(v_{1i}^2 - v_{1f}^2) = m_2(v_{2f}^2 - v_{2i}^2)$$

Factoring both sides of this equation gives

$$m_1(v_{1i} - v_{1f})(v_{1i} + v_{1f}) = m_2(v_{2f} - v_{2i})(v_{2f} + v_{2i}) \quad (9.18)$$

Next, let us separate the terms containing m_1 and m_2 in Equation 9.16 in a similar way to obtain

$$m_1(v_{1i} - v_{1f}) = m_2(v_{2f} - v_{2i}) \quad (9.19)$$

To obtain our final result, we divide Equation 9.18 by Equation 9.19 and obtain

$$v_{1i} + v_{1f} = v_{2f} + v_{2i}$$

Now rearrange terms once again so as to have initial quantities on the left and final quantities on the right:

$$v_{1i} - v_{2i} = -(v_{1f} - v_{2f}) \quad (9.20)$$

This equation, in combination with Equation 9.16, can be used to solve problems dealing with elastic collisions. This pair of equations (Eqs. 9.16 and 9.20) is easier to handle than the pair of Equations 9.16 and 9.17 because there are no quadratic terms like there are in Equation 9.17. According to Equation 9.20, the *relative* velocity of the two particles before the collision, $v_{1i} - v_{2i}$, equals the negative of their relative velocity after the collision, $-(v_{1f} - v_{2f})$.

Suppose the masses and initial velocities of both particles are known. Equations 9.16 and 9.20 can be solved for the final velocities in terms of the initial velocities because there are two equations and two unknowns:

$$v_{1f} = \left(\frac{m_1 - m_2}{m_1 + m_2} \right) v_{1i} + \left(\frac{2m_2}{m_1 + m_2} \right) v_{2i} \quad (9.21)$$

$$v_{2f} = \left(\frac{2m_1}{m_1 + m_2} \right) v_{1i} + \left(\frac{m_2 - m_1}{m_1 + m_2} \right) v_{2i} \quad (9.22)$$

It is important to use the appropriate signs for v_{1i} and v_{2i} in Equations 9.21 and 9.22.

Let us consider some special cases. If $m_1 = m_2$, Equations 9.21 and 9.22 show that $v_{1f} = v_{2i}$ and $v_{2f} = v_{1i}$, which means that the particles exchange velocities if they have equal masses. That is approximately what one observes in head-on billiard ball collisions: the cue ball stops and the struck ball moves away from the collision with the same velocity the cue ball had.

If particle 2 is initially at rest, then $v_{2i} = 0$, and Equations 9.21 and 9.22 become

$$v_{1f} = \left(\frac{m_1 - m_2}{m_1 + m_2} \right) v_{1i} \quad (9.23)$$

$$v_{2f} = \left(\frac{2m_1}{m_1 + m_2} \right) v_{1i} \quad (9.24)$$

If m_1 is much greater than m_2 and $v_{2i} = 0$, we see from Equations 9.23 and 9.24 that $v_{1f} \approx v_{1i}$ and $v_{2f} \approx 2v_{1i}$. That is, when a very heavy particle collides head-on with a

Elastic collision: particle 2 initially at rest ▶

very light one that is initially at rest, the heavy particle continues its motion unaltered after the collision and the light particle rebounds with a speed equal to about twice the initial speed of the heavy particle. An example of such a collision is that of a moving heavy atom, such as uranium, striking a light atom, such as hydrogen.

If m_2 is much greater than m_1 and particle 2 is initially at rest, then $v_{1f} \approx -v_{1i}$ and $v_{2f} \approx 0$. That is, when a very light particle collides head-on with a very heavy particle that is initially at rest, the light particle has its velocity reversed and the heavy one remains approximately at rest. For example, imagine what happens when you throw a table tennis ball at a bowling ball as in Quick Quiz 9.6 below.

Quick Quiz 9.5 In a perfectly inelastic one-dimensional collision between two moving objects, what condition alone is necessary so that the final kinetic energy of the system is zero after the collision? (a) The objects must have initial momenta with the same magnitude but opposite directions. (b) The objects must have the same mass. (c) The objects must have the same initial velocity. (d) The objects must have the same initial speed, with velocity vectors in opposite directions.

Quick Quiz 9.6 A table-tennis ball is thrown at a stationary bowling ball. The table-tennis ball makes a one-dimensional elastic collision and bounces back along the same line. Compared with the bowling ball after the collision, does the table-tennis ball have (a) a larger magnitude of momentum and more kinetic energy, (b) a smaller magnitude of momentum and more kinetic energy, (c) a larger magnitude of momentum and less kinetic energy, (d) a smaller magnitude of momentum and less kinetic energy, or (e) the same magnitude of momentum and the same kinetic energy?

Problem-Solving Strategy One-Dimensional Collisions

You should use the following approach when solving collision problems in one dimension:

- 1. Conceptualize.** Imagine the collision occurring in your mind. Draw simple diagrams of the particles before and after the collision and include appropriate velocity vectors. At first, you may have to guess at the directions of the final velocity vectors.
- 2. Categorize.** Is the system of particles isolated? If so, use the isolated system (momentum) model. Further categorize the collision as elastic, inelastic, or perfectly inelastic.
- 3. Analyze.** Set up the appropriate mathematical representation for the problem. If the collision is perfectly inelastic, use Equation 9.15. If the collision is elastic, use Equations 9.16 and 9.20. If the collision is inelastic, use Equation 9.16. To find the final velocities in this case, you will need some additional information.
- 4. Finalize.** Once you have determined your result, check to see if your answers are consistent with the mental and pictorial representations and that your results are realistic.

Example 9.4 The Executive Stress Reliever AM

An ingenious device that illustrates conservation of momentum and kinetic energy is shown in Figure 9.8 on page 260. It consists of five identical hard balls supported by strings of equal lengths. When ball 1 is pulled out and released, after the almost-elastic collision between it and ball 2, ball 1 stops and ball 5 moves out as shown in Figure 9.8b. If balls 1 and 2 are pulled out and released, they stop after the collision and balls 4 and 5 swing out, and so forth. Is it ever possible that when ball 1 is released, it stops after the collision and balls 4 and 5 will swing out on the opposite side and travel with half the speed of ball 1 as in Figure 9.8c?

continued

9.4 continued

SOLUTION

Conceptualize With the help of Figure 9.8c, imagine one ball coming in from the left and two balls exiting the collision on the right. That is the phenomenon we want to test to see if it could ever happen.

Categorize Because of the very short time interval between the arrival of the ball from the left and the departure of the ball(s) from the right, we can use the impulse approximation to ignore the gravitational forces on the balls and model the five balls as an *isolated system* in terms of both *momentum* and *energy*. Because the balls are hard, we can categorize the collisions between them as elastic for purposes of calculation.

Analyze Let's consider the situation shown in Figure 9.8c. The momentum

of the system before the collision is mv , where m is the mass of ball 1 and v is its speed immediately before the collision. After the collision, we imagine that ball 1 stops and balls 4 and 5 swing out, each moving with speed $v/2$. The total momentum of the system after the collision would be $m(v/2) + m(v/2) = mv$. Therefore, the momentum of the system is conserved in the situation shown in Figure 9.8c!

The kinetic energy of the system immediately before the collision is $K_i = \frac{1}{2}mv^2$ and that after the collision is $K_f = \frac{1}{2}m(v/2)^2 + \frac{1}{2}m(v/2)^2 = \frac{1}{4}mv^2$. That shows that the kinetic energy of the system is *not* conserved, which is inconsistent with our assumption that the collisions are elastic.

Finalize Our analysis shows that it is *not* possible for balls 4 and 5 to swing out when only ball 1 is released. The only way to conserve both momentum and kinetic energy of the system is for one ball to move out when one ball is released, two balls to move out when two are released, and so on.

WHAT IF? Consider what would happen if balls 4 and 5 are glued together. Now what happens when ball 1 is pulled out and released?

Answer In this situation, balls 4 and 5 *must* move together as a single object after the collision. We have argued that both momentum and energy of the system cannot be conserved in this case. We assumed, however, ball 1 stopped after striking ball 2. What if we do not make this assumption? Consider the conservation equations with the assumption that ball 1 moves after the collision. For conservation of momentum,

$$p_i = p_f$$

$$mv_{1i} = mv_{1f} + 2mv_{4,5}$$

where $v_{4,5}$ refers to the final speed of the ball 4–ball 5 combination. Conservation of kinetic energy gives us

$$K_i = K_f$$

$$\frac{1}{2}mv_{1i}^2 = \frac{1}{2}mv_{1f}^2 + \frac{1}{2}(2m)v_{4,5}^2$$

Combining these equations gives

$$v_{4,5} = \frac{2}{3}v_{1i} \quad v_{1f} = -\frac{1}{3}v_{1i}$$

Therefore, balls 4 and 5 move together as one object after the collision while ball 1 bounces back from the collision with one third of its original speed.

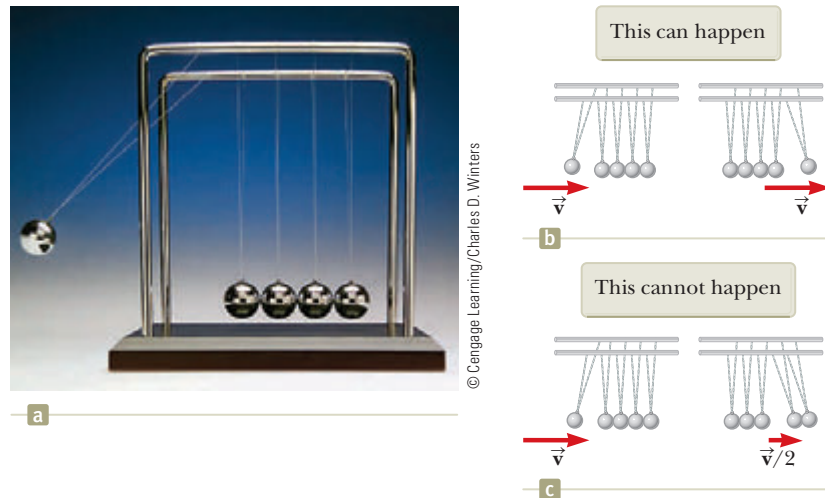


Figure 9.8 (Example 9.4) (a) An executive stress reliever. (b) If one ball swings down, we see one ball swing out at the other end. (c) Is it possible for one ball to swing down and two balls to leave the other end with half the speed of the first ball? In (b) and (c), the velocity vectors shown represent those of the balls immediately before and immediately after the collision.

Example 9.5

Carry Collision Insurance! **AM**

An 1 800-kg car stopped at a traffic light is struck from the rear by a 900-kg car. The two cars become entangled, moving along the same path as that of the originally moving car. If the smaller car were moving at 20.0 m/s before the collision, what is the velocity of the entangled cars after the collision?

SOLUTION

Conceptualize This kind of collision is easily visualized, and one can predict that after the collision both cars will be moving in the same direction as that of the initially moving car. Because the initially moving car has only half the mass of the stationary car, we expect the final velocity of the cars to be relatively small.

Categorize We identify the two cars as an *isolated system* in terms of *momentum* in the horizontal direction and apply the impulse approximation during the short time interval of the collision. The phrase “become entangled” tells us to categorize the collision as perfectly inelastic.

Analyze The magnitude of the total momentum of the system before the collision is equal to that of the smaller car because the larger car is initially at rest.

Use the isolated system model for momentum:

$$\Delta \vec{p} = 0 \rightarrow p_i = p_f \rightarrow m_1 v_i = (m_1 + m_2) v_f$$

Solve for v_f and substitute numerical values:

$$v_f = \frac{m_1 v_i}{m_1 + m_2} = \frac{(900 \text{ kg})(20.0 \text{ m/s})}{900 \text{ kg} + 1\,800 \text{ kg}} = 6.67 \text{ m/s}$$

Finalize Because the final velocity is positive, the direction of the final velocity of the combination is the same as the velocity of the initially moving car as predicted. The speed of the combination is also much lower than the initial speed of the moving car.

WHAT IF? Suppose we reverse the masses of the cars. What if a stationary 900-kg car is struck by a moving 1 800-kg car? Is the final speed the same as before?

Answer Intuitively, we can guess that the final speed of the combination is higher than 6.67 m/s if the initially moving car is the more massive car. Mathematically, that should be the case because the system has a larger momentum if the initially moving car is the more massive one. Solving for the new final velocity, we find

$$v_f = \frac{m_1 v_i}{m_1 + m_2} = \frac{(1\,800 \text{ kg})(20.0 \text{ m/s})}{1\,800 \text{ kg} + 900 \text{ kg}} = 13.3 \text{ m/s}$$

which is two times greater than the previous final velocity.

Example 9.6

The Ballistic Pendulum **AM**

The ballistic pendulum (Fig. 9.9, page 262) is an apparatus used to measure the speed of a fast-moving projectile such as a bullet. A projectile of mass m_1 is fired into a large block of wood of mass m_2 suspended from some light wires. The projectile embeds in the block, and the entire system swings through a height h . How can we determine the speed of the projectile from a measurement of h ?

SOLUTION

Conceptualize Figure 9.9a helps conceptualize the situation. Run the animation in your mind: the projectile enters the pendulum, which swings up to some height at which it momentarily comes to rest.

Categorize The projectile and the block form an *isolated system* in terms of *momentum* if we identify configuration *A* as immediately before the collision and configuration *B* as immediately after the collision. Because the projectile imbeds in the block, we can categorize the collision between them as perfectly inelastic.

Analyze To analyze the collision, we use Equation 9.15, which gives the speed of the system immediately after the collision when we assume the impulse approximation. *continued*

9.6 continued

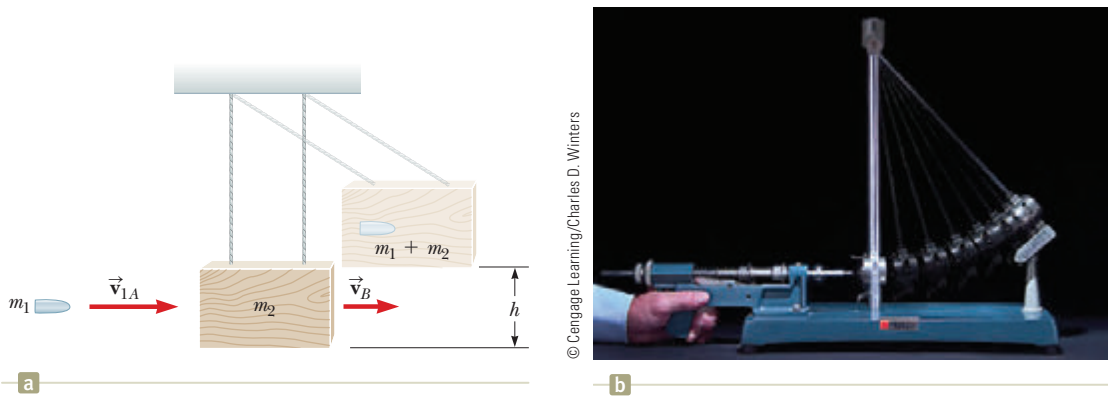


Figure 9.9 (Example 9.6) (a) Diagram of a ballistic pendulum. Notice that \vec{v}_{1A} is the velocity of the projectile immediately before the collision and \vec{v}_B is the velocity of the projectile–block system immediately after the perfectly inelastic collision. (b) Multiflash photograph of a ballistic pendulum used in the laboratory.

Noting that $v_{2A} = 0$, solve Equation 9.15 for v_B :

$$(1) \quad v_B = \frac{m_1 v_{1A}}{m_1 + m_2}$$

Categorize For the process during which the projectile–block combination swings upward to height h (ending at a configuration we'll call C), we focus on a *different* system, that of the projectile, the block, and the Earth. We categorize this part of the problem as one involving an *isolated system for energy* with no nonconservative forces acting.

Analyze Write an expression for the total kinetic energy of the system immediately after the collision:

$$(2) \quad K_B = \frac{1}{2}(m_1 + m_2)v_B^2$$

Substitute the value of v_B from Equation (1) into Equation (2):

$$K_B = \frac{m_1^2 v_{1A}^2}{2(m_1 + m_2)}$$

This kinetic energy of the system immediately after the collision is *less* than the initial kinetic energy of the projectile as is expected in an inelastic collision.

We define the gravitational potential energy of the system for configuration B to be zero. Therefore, $U_B = 0$, whereas $U_C = (m_1 + m_2)gh$.

Apply the isolated system model to the system:

$$\Delta K + \Delta U = 0 \rightarrow (K_C - K_B) + (U_C - U_B) = 0$$

Substitute the energies:

$$\left(0 - \frac{m_1^2 v_{1A}^2}{2(m_1 + m_2)}\right) + [(m_1 + m_2)gh - 0] = 0$$

Solve for v_{1A} :

$$v_{1A} = \left(\frac{m_1 + m_2}{m_1}\right)\sqrt{2gh}$$

Finalize We had to solve this problem in two steps. Each step involved a different system and a different analysis model: isolated system (momentum) for the first step and isolated system (energy) for the second. Because the collision was assumed to be perfectly inelastic, some mechanical energy was transformed to internal energy during the collision. Therefore, it would have been *incorrect* to apply the isolated system (energy) model to the entire process by equating the initial kinetic energy of the incoming projectile with the final gravitational potential energy of the projectile–block–Earth combination.

Example 9.7 A Two-Body Collision with a Spring AM

A block of mass $m_1 = 1.60$ kg initially moving to the right with a speed of 4.00 m/s on a frictionless, horizontal track collides with a light spring attached to a second block of mass $m_2 = 2.10$ kg initially moving to the left with a speed of 2.50 m/s as shown in Figure 9.10a. The spring constant is 600 N/m.

9.7 continued

(A) Find the velocities of the two blocks after the collision.

SOLUTION

Conceptualize With the help of Figure 9.10a, run an animation of the collision in your mind. Figure 9.10b shows an instant during the collision when the spring is compressed. Eventually, block 1 and the spring will again separate, so the system will look like Figure 9.10a again but with different velocity vectors for the two blocks.

Categorize Because the spring force is conservative, kinetic energy in the system of two blocks and the spring is not transformed to internal energy during the compression of the spring. Ignoring any sound made when the block hits the spring, we can categorize the collision as being elastic and the two blocks and the spring as an *isolated system* for both *energy* and *momentum*.

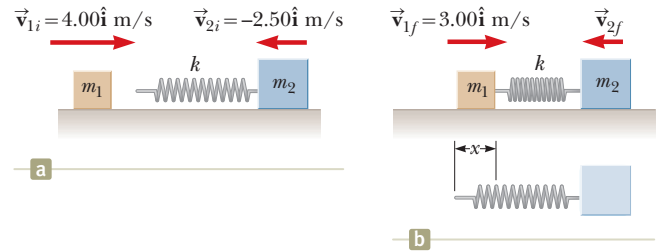


Figure 9.10 (Example 9.7) A moving block approaches a second moving block that is attached to a spring.

Analyze Because momentum of the system is conserved, apply Equation 9.16:

$$(1) \quad m_1 v_{1i} + m_2 v_{2i} = m_1 v_{1f} + m_2 v_{2f}$$

Because the collision is elastic, apply Equation 9.20:

$$(2) \quad v_{1i} - v_{2i} = -(v_{1f} - v_{2f})$$

Multiply Equation (2) by m_1 :

$$(3) \quad m_1 v_{1i} - m_1 v_{2i} = -m_1 v_{1f} + m_1 v_{2f}$$

Add Equations (1) and (3):

$$2m_1 v_{1i} + (m_2 - m_1)v_{2i} = (m_1 + m_2)v_{2f}$$

Solve for v_{2f} :

$$v_{2f} = \frac{2m_1 v_{1i} + (m_2 - m_1)v_{2i}}{m_1 + m_2}$$

Substitute numerical values:

$$v_{2f} = \frac{2(1.60 \text{ kg})(4.00 \text{ m/s}) + (2.10 \text{ kg} - 1.60 \text{ kg})(-2.50 \text{ m/s})}{1.60 \text{ kg} + 2.10 \text{ kg}} = 3.12 \text{ m/s}$$

Solve Equation (2) for v_{1f} and substitute numerical values:

$$v_{1f} = v_{2f} - v_{1i} + v_{2i} = 3.12 \text{ m/s} - 4.00 \text{ m/s} + (-2.50 \text{ m/s}) = -3.38 \text{ m/s}$$

(B) Determine the velocity of block 2 during the collision, at the instant block 1 is moving to the right with a velocity of +3.00 m/s as in Figure 9.10b.

SOLUTION

Conceptualize Focus your attention now on Figure 9.10b, which represents the final configuration of the system for the time interval of interest.

Categorize Because the momentum and mechanical energy of the *isolated system* of two blocks and the spring are conserved *throughout* the collision, the collision can be categorized as elastic for *any* final instant of time. Let us now choose the final instant to be when block 1 is moving with a velocity of +3.00 m/s.

Analyze Apply Equation 9.16:

$$m_1 v_{1i} + m_2 v_{2i} = m_1 v_{1f} + m_2 v_{2f}$$

Solve for v_{2f} :

$$v_{2f} = \frac{m_1 v_{1i} + m_2 v_{2i} - m_1 v_{1f}}{m_2}$$

Substitute numerical values:

$$v_{2f} = \frac{(1.60 \text{ kg})(4.00 \text{ m/s}) + (2.10 \text{ kg})(-2.50 \text{ m/s}) - (1.60 \text{ kg})(3.00 \text{ m/s})}{2.10 \text{ kg}} = -1.74 \text{ m/s}$$

continued

9.7 continued

Finalize The negative value for v_{2f} means that block 2 is still moving to the left at the instant we are considering.

(C) Determine the distance the spring is compressed at that instant.

SOLUTION

Conceptualize Once again, focus on the configuration of the system shown in Figure 9.10b.

Categorize For the system of the spring and two blocks, no friction or other nonconservative forces act within the system. Therefore, we categorize the system as an *isolated system* in terms of *energy* with no nonconservative forces acting. The system also remains an *isolated system* in terms of *momentum*.

Analyze We choose the initial configuration of the system to be that existing immediately before block 1 strikes the spring and the final configuration to be that when block 1 is moving to the right at 3.00 m/s.

Write the appropriate reduction of Equation 8.2: $\Delta K + \Delta U = 0$

Evaluate the energies, recognizing that two objects in the system have kinetic energy and that the potential energy is elastic:

$$\text{Solve for } x^2: \quad x^2 = \frac{1}{k} [m_1(v_{1i}^2 - v_{1f}^2) + m_2(v_{2i}^2 - v_{2f}^2)]$$

$$\begin{aligned} \text{Substitute numerical values:} \quad x^2 &= \left(\frac{1}{600 \text{ N/m}} \right) \{ (1.60 \text{ kg}) [(4.00 \text{ m/s})^2 - (3.00 \text{ m/s})^2] + (2.10 \text{ kg}) [(2.50 \text{ m/s})^2 - (1.74 \text{ m/s})^2] \} \\ &\rightarrow x = \mathbf{0.173 \text{ m}} \end{aligned}$$

Finalize This answer is not the maximum compression of the spring because the two blocks are still moving toward each other at the instant shown in Figure 9.10b. Can you determine the maximum compression of the spring?

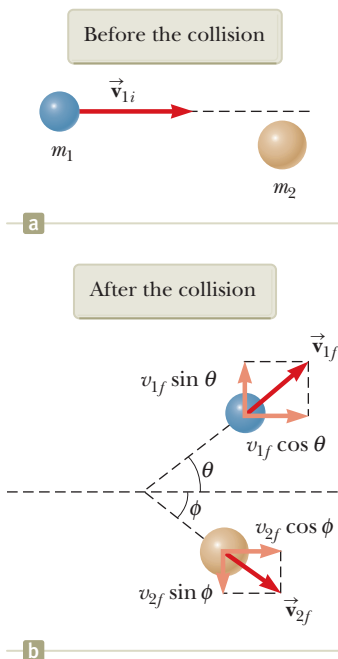


Figure 9.11 An elastic, glancing collision between two particles.

9.5 Collisions in Two Dimensions

In Section 9.2, we showed that the momentum of a system of two particles is conserved when the system is isolated. For any collision of two particles, this result implies that the momentum in each of the directions x , y , and z is conserved. An important subset of collisions takes place in a plane. The game of billiards is a familiar example involving multiple collisions of objects moving on a two-dimensional surface. For such two-dimensional collisions, we obtain two component equations for conservation of momentum:

$$m_1 v_{1ix} + m_2 v_{2ix} = m_1 v_{1fx} + m_2 v_{2fx}$$

$$m_1 v_{1iy} + m_2 v_{2iy} = m_1 v_{1fy} + m_2 v_{2fy}$$

where the three subscripts on the velocity components in these equations represent, respectively, the identification of the object (1, 2), initial and final values (i , f), and the velocity component (x , y).

Let us consider a specific two-dimensional problem in which particle 1 of mass m_1 collides with particle 2 of mass m_2 initially at rest as in Figure 9.11. After the collision (Fig. 9.11b), particle 1 moves at an angle θ with respect to the horizontal and particle 2 moves at an angle ϕ with respect to the horizontal. This event is called a *glancing collision*. Applying the law of conservation of momentum in component form and noting that the initial y component of the momentum of the two-particle system is zero gives

$$\Delta p_x = 0 \rightarrow p_{ix} = p_{fx} \rightarrow m_1 v_{1i} = m_1 v_{1f} \cos \theta + m_2 v_{2f} \cos \phi \quad (9.25)$$

$$\Delta p_y = 0 \rightarrow p_{iy} = p_{fy} \rightarrow 0 = m_1 v_{1f} \sin \theta - m_2 v_{2f} \sin \phi \quad (9.26)$$

where the minus sign in Equation 9.26 is included because after the collision particle 2 has a y component of velocity that is downward. (The symbols v in these particular equations are speeds, not velocity components. The direction of the component vector is indicated explicitly with plus or minus signs.) We now have two independent equations. As long as no more than two of the seven quantities in Equations 9.25 and 9.26 are unknown, we can solve the problem.

If the collision is elastic, we can also use Equation 9.17 (conservation of kinetic energy) with $v_{2i} = 0$:

$$K_i = K_f \rightarrow \frac{1}{2}m_1v_{1i}^2 = \frac{1}{2}m_1v_{1f}^2 + \frac{1}{2}m_2v_{2f}^2 \quad (9.27)$$

Knowing the initial speed of particle 1 and both masses, we are left with four unknowns (v_{1f} , v_{2f} , θ , and ϕ). Because we have only three equations, one of the four remaining quantities must be given to determine the motion after the elastic collision from conservation principles alone.

If the collision is inelastic, kinetic energy is *not* conserved and Equation 9.27 does *not* apply.

Problem-Solving Strategy Two-Dimensional Collisions

The following procedure is recommended when dealing with problems involving collisions between two particles in two dimensions.

- 1. Conceptualize.** Imagine the collisions occurring and predict the approximate directions in which the particles will move after the collision. Set up a coordinate system and define your velocities in terms of that system. It is convenient to have the x axis coincide with one of the initial velocities. Sketch the coordinate system, draw and label all velocity vectors, and include all the given information.
- 2. Categorize.** Is the system of particles truly isolated? If so, categorize the collision as elastic, inelastic, or perfectly inelastic.
- 3. Analyze.** Write expressions for the x and y components of the momentum of each object before and after the collision. Remember to include the appropriate signs for the components of the velocity vectors and pay careful attention to signs throughout the calculation.

Apply the isolated system model for momentum $\Delta\vec{p} = 0$. When applied in each direction, this equation will generally reduce to $p_{ix} = p_{fx}$ and $p_{iy} = p_{fy}$, where each of these terms refer to the sum of the momenta of all objects in the system. Write expressions for the *total* momentum in the x direction *before* and *after* the collision and equate the two. Repeat this procedure for the total momentum in the y direction.

Proceed to solve the momentum equations for the unknown quantities. If the collision is inelastic, kinetic energy is *not* conserved and additional information is probably required. If the collision is perfectly inelastic, the final velocities of the two objects are equal.

If the collision is elastic, kinetic energy is conserved and you can equate the total kinetic energy of the system before the collision to the total kinetic energy after the collision, providing an additional relationship between the velocity magnitudes.

- 4. Finalize.** Once you have determined your result, check to see if your answers are consistent with the mental and pictorial representations and that your results are realistic.

Pitfall Prevention 9.4

Don't Use Equation 9.20 Equation 9.20, relating the initial and final relative velocities of two colliding objects, is only valid for one-dimensional elastic collisions. Do not use this equation when analyzing two-dimensional collisions.

Example 9.8

Collision at an Intersection AM

A 1 500-kg car traveling east with a speed of 25.0 m/s collides at an intersection with a 2 500-kg truck traveling north at a speed of 20.0 m/s as shown in Figure 9.12 on page 266. Find the direction and magnitude of the velocity of the wreckage after the collision, assuming the vehicles stick together after the collision.

continued

9.8 continued

SOLUTION

Conceptualize Figure 9.12 should help you conceptualize the situation before and after the collision. Let us choose east to be along the positive x direction and north to be along the positive y direction.

Categorize Because we consider moments immediately before and immediately after the collision as defining our time interval, we ignore the small effect that friction would have on the wheels of the vehicles and model the two vehicles as an *isolated system* in terms of *momentum*. We also ignore the vehicles' sizes and model them as particles. The collision is perfectly inelastic because the car and the truck stick together after the collision.

Analyze Before the collision, the only object having momentum in the x direction is the car. Therefore, the magnitude of the total initial momentum of the system (car plus truck) in the x direction is that of only the car. Similarly, the total initial momentum of the system in the y direction is that of the truck. After the collision, let us assume the wreckage moves at an angle θ with respect to the x axis with speed v_f .

Apply the isolated system model for momentum in the x direction:

$$\Delta p_x = 0 \rightarrow \sum p_{xi} = \sum p_{xf} \rightarrow (1) \quad m_1 v_{1i} = (m_1 + m_2) v_f \cos \theta$$

Apply the isolated system model for momentum in the y direction:

$$\Delta p_y = 0 \rightarrow \sum p_{yi} = \sum p_{yf} \rightarrow (2) \quad m_2 v_{2i} = (m_1 + m_2) v_f \sin \theta$$

Divide Equation (2) by Equation (1):

$$\frac{m_2 v_{2i}}{m_1 v_{1i}} = \frac{\sin \theta}{\cos \theta} = \tan \theta$$

Solve for θ and substitute numerical values:

$$\theta = \tan^{-1} \left(\frac{m_2 v_{2i}}{m_1 v_{1i}} \right) = \tan^{-1} \left[\frac{(2\,500 \text{ kg})(20.0 \text{ m/s})}{(1\,500 \text{ kg})(25.0 \text{ m/s})} \right] = 53.1^\circ$$

Use Equation (2) to find the value of v_f and substitute numerical values:

$$v_f = \frac{m_2 v_{2i}}{(m_1 + m_2) \sin \theta} = \frac{(2\,500 \text{ kg})(20.0 \text{ m/s})}{(1\,500 \text{ kg} + 2\,500 \text{ kg}) \sin 53.1^\circ} = 15.6 \text{ m/s}$$

Finalize Notice that the angle θ is qualitatively in agreement with Figure 9.12. Also notice that the final speed of the combination is less than the initial speeds of the two cars. This result is consistent with the kinetic energy of the system being reduced in an inelastic collision. It might help if you draw the momentum vectors of each vehicle before the collision and the two vehicles together after the collision.

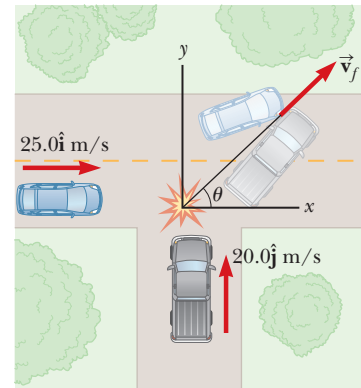


Figure 9.12 (Example 9.8) An eastbound car colliding with a northbound truck.

Example 9.9 Proton–Proton Collision AM

A proton collides elastically with another proton that is initially at rest. The incoming proton has an initial speed of 3.50×10^5 m/s and makes a glancing collision with the second proton as in Figure 9.11. (At close separations, the protons exert a repulsive electrostatic force on each other.) After the collision, one proton moves off at an angle of 37.0° to the original direction of motion and the second deflects at an angle of ϕ to the same axis. Find the final speeds of the two protons and the angle ϕ .

SOLUTION

Conceptualize This collision is like that shown in Figure 9.11, which will help you conceptualize the behavior of the system. We define the x axis to be along the direction of the velocity vector of the initially moving proton.

Categorize The pair of protons form an *isolated system*. Both momentum and kinetic energy of the system are conserved in this glancing elastic collision.

9.9 continued

Analyze Using the isolated system model for both momentum and energy for a two-dimensional elastic collision, set up the mathematical representation with Equations 9.25 through 9.27:

Rearrange Equations (1) and (2):

Square these two equations and add them:

Incorporate that the sum of the squares of sine and cosine for *any* angle is equal to 1:

Substitute Equation (4) into Equation (3):

One possible solution of Equation (5) is $v_{1f} = 0$, which corresponds to a head-on, one-dimensional collision in which the first proton stops and the second continues with the same speed in the same direction. That is not the solution we want.

Divide both sides of Equation (5) by v_{1f} and solve for the remaining factor of v_{1f} :

Use Equation (3) to find v_{2f} :

Use Equation (2) to find ϕ :

$$(1) \quad v_{1i} = v_{1f} \cos \theta + v_{2f} \cos \phi$$

$$(2) \quad 0 = v_{1f} \sin \theta - v_{2f} \sin \phi$$

$$(3) \quad v_{1i}^2 = v_{1f}^2 + v_{2f}^2$$

$$v_{2f} \cos \phi = v_{1i} - v_{1f} \cos \theta$$

$$v_{2f} \sin \phi = v_{1f} \sin \theta$$

$$v_{2f}^2 \cos^2 \phi + v_{2f}^2 \sin^2 \phi =$$

$$v_{1i}^2 - 2v_{1i}v_{1f} \cos \theta + v_{1f}^2 \cos^2 \theta + v_{1f}^2 \sin^2 \theta$$

$$(4) \quad v_{2f}^2 = v_{1i}^2 - 2v_{1i}v_{1f} \cos \theta + v_{1f}^2$$

$$v_{1f}^2 + (v_{1i}^2 - 2v_{1i}v_{1f} \cos \theta + v_{1f}^2) = v_{1i}^2$$

$$(5) \quad v_{1f}^2 - v_{1i}v_{1f} \cos \theta = 0$$

$$v_{1f} = v_{1i} \cos \theta = (3.50 \times 10^5 \text{ m/s}) \cos 37.0^\circ = 2.80 \times 10^5 \text{ m/s}$$

$$v_{2f} = \sqrt{v_{1i}^2 - v_{1f}^2} = \sqrt{(3.50 \times 10^5 \text{ m/s})^2 - (2.80 \times 10^5 \text{ m/s})^2}$$

$$= 2.11 \times 10^5 \text{ m/s}$$

$$(2) \quad \phi = \sin^{-1} \left(\frac{v_{1f} \sin \theta}{v_{2f}} \right) = \sin^{-1} \left[\frac{(2.80 \times 10^5 \text{ m/s}) \sin 37.0^\circ}{(2.11 \times 10^5 \text{ m/s})} \right]$$

$$= 53.0^\circ$$

Finalize It is interesting that $\theta + \phi = 90^\circ$. This result is *not* accidental. Whenever two objects of equal mass collide elastically in a glancing collision and one of them is initially at rest, their final velocities are perpendicular to each other.

9.6 The Center of Mass

In this section, we describe the overall motion of a system in terms of a special point called the **center of mass** of the system. The system can be either a small number of particles or an extended, continuous object, such as a gymnast leaping through the air. We shall see that the translational motion of the center of mass of the system is the same as if all the mass of the system were concentrated at that point. That is, the system moves as if the net external force were applied to a single particle located at the center of mass. This model, the *particle model*, was introduced in Chapter 2. This behavior is independent of other motion, such as rotation or vibration of the system or deformation of the system (for instance, when a gymnast folds her body).

Consider a system consisting of a pair of particles that have different masses and are connected by a light, rigid rod (Fig. 9.13 on page 268). The position of the center of mass of a system can be described as being the *average position* of the system's mass. The center of mass of the system is located somewhere on the line joining the two particles and is closer to the particle having the larger mass. If a single force is applied at a point on the rod above the center of mass, the system rotates clockwise (see Fig. 9.13a). If the force is applied at a point on the rod below the center of mass, the system rotates counterclockwise (see Fig. 9.13b). If the force

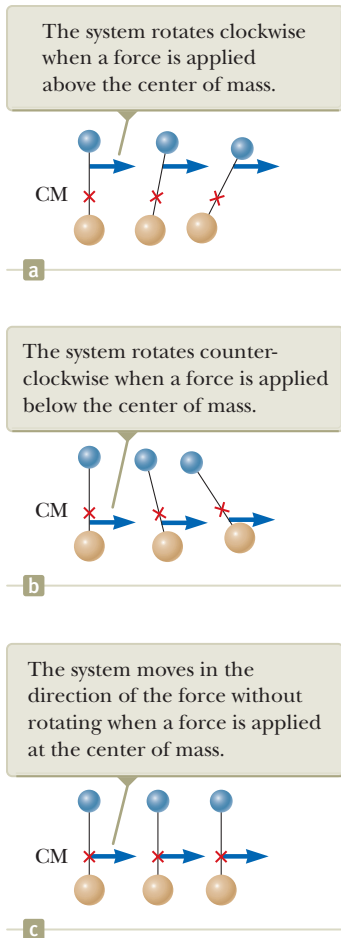


Figure 9.13 A force is applied to a system of two particles of unequal mass connected by a light, rigid rod.

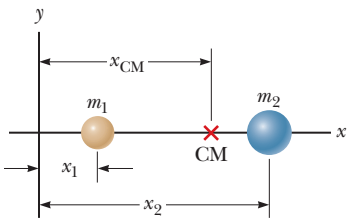


Figure 9.14 The center of mass of two particles of unequal mass on the x axis is located at x_{CM} , a point between the particles, closer to the one having the larger mass.

is applied at the center of mass, the system moves in the direction of the force without rotating (see Fig. 9.13c). The center of mass of an object can be located with this procedure.

The center of mass of the pair of particles described in Figure 9.14 is located on the x axis and lies somewhere between the particles. Its x coordinate is given by

$$x_{\text{CM}} \equiv \frac{m_1 x_1 + m_2 x_2}{m_1 + m_2} \quad (9.28)$$

For example, if $x_1 = 0$, $x_2 = d$, and $m_2 = 2m_1$, we find that $x_{\text{CM}} = \frac{2}{3}d$. That is, the center of mass lies closer to the more massive particle. If the two masses are equal, the center of mass lies midway between the particles.

We can extend this concept to a system of many particles with masses m_i in three dimensions. The x coordinate of the center of mass of n particles is defined to be

$$x_{\text{CM}} \equiv \frac{m_1 x_1 + m_2 x_2 + m_3 x_3 + \cdots + m_n x_n}{m_1 + m_2 + m_3 + \cdots + m_n} = \frac{\sum_i m_i x_i}{\sum_i m_i} = \frac{\sum_i m_i x_i}{M} = \frac{1}{M} \sum_i m_i x_i \quad (9.29)$$

where x_i is the x coordinate of the i th particle and the total mass is $M \equiv \sum_i m_i$, where the sum runs over all n particles. The y and z coordinates of the center of mass are similarly defined by the equations

$$y_{\text{CM}} \equiv \frac{1}{M} \sum_i m_i y_i \quad \text{and} \quad z_{\text{CM}} \equiv \frac{1}{M} \sum_i m_i z_i \quad (9.30)$$

The center of mass can be located in three dimensions by its position vector \vec{r}_{CM} . The components of this vector are x_{CM} , y_{CM} , and z_{CM} , defined in Equations 9.29 and 9.30. Therefore,

$$\begin{aligned} \vec{r}_{\text{CM}} &= x_{\text{CM}} \hat{i} + y_{\text{CM}} \hat{j} + z_{\text{CM}} \hat{k} = \frac{1}{M} \sum_i m_i x_i \hat{i} + \frac{1}{M} \sum_i m_i y_i \hat{j} + \frac{1}{M} \sum_i m_i z_i \hat{k} \\ \vec{r}_{\text{CM}} &\equiv \frac{1}{M} \sum_i m_i \vec{r}_i \end{aligned} \quad (9.31)$$

where \vec{r}_i is the position vector of the i th particle, defined by

$$\vec{r}_i \equiv x_i \hat{i} + y_i \hat{j} + z_i \hat{k}$$

Although locating the center of mass for an extended, continuous object is somewhat more cumbersome than locating the center of mass of a small number of particles, the basic ideas we have discussed still apply. Think of an extended object as a system containing a large number of small mass elements such as the cube in Figure 9.15. Because the separation between elements is very small, the object can be considered to have a continuous mass distribution. By dividing the object into elements of mass Δm_i with coordinates x_i , y_i , z_i , we see that the x coordinate of the center of mass is approximately

$$x_{\text{CM}} \approx \frac{1}{M} \sum_i x_i \Delta m_i$$

with similar expressions for y_{CM} and z_{CM} . If we let the number of elements n approach infinity, the size of each element approaches zero and x_{CM} is given precisely. In this limit, we replace the sum by an integral and Δm_i by the differential element dm :

$$x_{\text{CM}} = \lim_{\Delta m_i \rightarrow 0} \frac{1}{M} \sum_i x_i \Delta m_i = \frac{1}{M} \int x \, dm \quad (9.32)$$

Likewise, for y_{CM} and z_{CM} we obtain

$$y_{\text{CM}} = \frac{1}{M} \int y \, dm \quad \text{and} \quad z_{\text{CM}} = \frac{1}{M} \int z \, dm \quad (9.33)$$

We can express the vector position of the center of mass of an extended object in the form

$$\vec{r}_{\text{CM}} = \frac{1}{M} \int \vec{r} \, dm \tag{9.34}$$

which is equivalent to the three expressions given by Equations 9.32 and 9.33.

The center of mass of any symmetric object of uniform density lies on an axis of symmetry and on any plane of symmetry. For example, the center of mass of a uniform rod lies in the rod, midway between its ends. The center of mass of a sphere or a cube lies at its geometric center.

Because an extended object is a continuous distribution of mass, each small mass element is acted upon by the gravitational force. The net effect of all these forces is equivalent to the effect of a single force $M\vec{g}$ acting through a special point, called the **center of gravity**. If \vec{g} is constant over the mass distribution, the center of gravity coincides with the center of mass. If an extended object is pivoted at its center of gravity, it balances in any orientation.

The center of gravity of an irregularly shaped object such as a wrench can be determined by suspending the object first from one point and then from another. In Figure 9.16, a wrench is hung from point *A* and a vertical line *AB* (which can be established with a plumb bob) is drawn when the wrench has stopped swinging. The wrench is then hung from point *C*, and a second vertical line *CD* is drawn. The center of gravity is halfway through the thickness of the wrench, under the intersection of these two lines. In general, if the wrench is hung freely from any point, the vertical line through this point must pass through the center of gravity.

Quick Quiz 9.7 A baseball bat of uniform density is cut at the location of its center of mass as shown in Figure 9.17. Which piece has the smaller mass? (a) the piece on the right (b) the piece on the left (c) both pieces have the same mass (d) impossible to determine

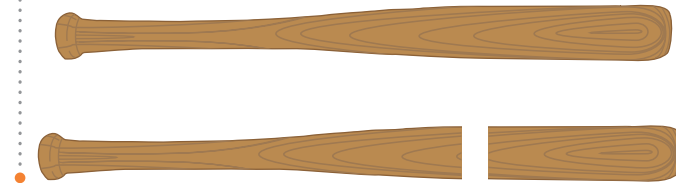


Figure 9.17 (Quick Quiz 9.7) A baseball bat cut at the location of its center of mass.

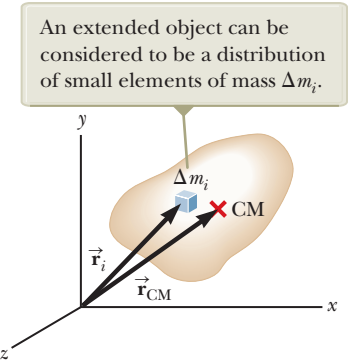


Figure 9.15 The center of mass is located at the vector position \vec{r}_{CM} , which has coordinates x_{CM} , y_{CM} , and z_{CM} .

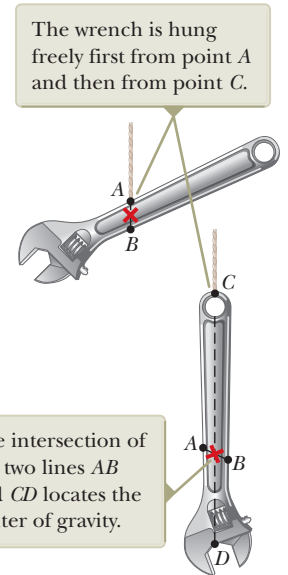


Figure 9.16 An experimental technique for determining the center of gravity of a wrench.

Example 9.10 The Center of Mass of Three Particles

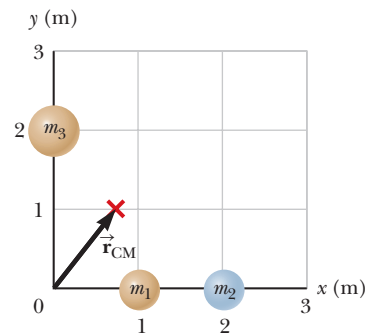
A system consists of three particles located as shown in Figure 9.18. Find the center of mass of the system. The masses of the particles are $m_1 = m_2 = 1.0$ kg and $m_3 = 2.0$ kg.

SOLUTION

Conceptualize Figure 9.18 shows the three masses. Your intuition should tell you that the center of mass is located somewhere in the region between the blue particle and the pair of tan particles as shown in the figure.

Categorize We categorize this example as a substitution problem because we will be using the equations for the center of mass developed in this section.

Figure 9.18 (Example 9.10) Two particles are located on the *x* axis, and a single particle is located on the *y* axis as shown. The vector indicates the location of the system's center of mass.



continued

9.10 continued

Use the defining equations for the coordinates of the center of mass and notice that $z_{\text{CM}} = 0$:

$$x_{\text{CM}} = \frac{1}{M} \sum_i m_i x_i = \frac{m_1 x_1 + m_2 x_2 + m_3 x_3}{m_1 + m_2 + m_3} \\ = \frac{(1.0 \text{ kg})(1.0 \text{ m}) + (1.0 \text{ kg})(2.0 \text{ m}) + (2.0 \text{ kg})(0)}{1.0 \text{ kg} + 1.0 \text{ kg} + 2.0 \text{ kg}} = \frac{3.0 \text{ kg} \cdot \text{m}}{4.0 \text{ kg}} = 0.75 \text{ m}$$

$$y_{\text{CM}} = \frac{1}{M} \sum_i m_i y_i = \frac{m_1 y_1 + m_2 y_2 + m_3 y_3}{m_1 + m_2 + m_3} \\ = \frac{(1.0 \text{ kg})(0) + (1.0 \text{ kg})(0) + (2.0 \text{ kg})(2.0 \text{ m})}{4.0 \text{ kg}} = \frac{4.0 \text{ kg} \cdot \text{m}}{4.0 \text{ kg}} = 1.0 \text{ m}$$

Write the position vector of the center of mass:

$$\vec{r}_{\text{CM}} \equiv x_{\text{CM}} \hat{i} + y_{\text{CM}} \hat{j} = (0.75 \hat{i} + 1.0 \hat{j}) \text{ m}$$

Example 9.11 The Center of Mass of a Rod

(A) Show that the center of mass of a rod of mass M and length L lies midway between its ends, assuming the rod has a uniform mass per unit length.

SOLUTION

Conceptualize The rod is shown aligned along the x axis in Figure 9.19, so $y_{\text{CM}} = z_{\text{CM}} = 0$. What is your prediction of the value of x_{CM} ?

Categorize We categorize this example as an analysis problem because we need to divide the rod into small mass elements to perform the integration in Equation 9.32.

Analyze The mass per unit length (this quantity is called the *linear mass density*) can be written as $\lambda = M/L$ for the uniform rod. If the rod is divided into elements of length dx , the mass of each element is $dm = \lambda dx$.

Use Equation 9.32 to find an expression for x_{CM} :

$$x_{\text{CM}} = \frac{1}{M} \int x dm = \frac{1}{M} \int_0^L x \lambda dx = \frac{\lambda}{M} \left. \frac{x^2}{2} \right|_0^L = \frac{\lambda L^2}{2M}$$

Substitute $\lambda = M/L$:

$$x_{\text{CM}} = \frac{L^2}{2M} \left(\frac{M}{L} \right) = \frac{1}{2} L$$

One can also use symmetry arguments to obtain the same result.

(B) Suppose a rod is *nonuniform* such that its mass per unit length varies linearly with x according to the expression $\lambda = \alpha x$, where α is a constant. Find the x coordinate of the center of mass as a fraction of L .

SOLUTION

Conceptualize Because the mass per unit length is not constant in this case but is proportional to x , elements of the rod to the right are more massive than elements near the left end of the rod.

Categorize This problem is categorized similarly to part (A), with the added twist that the linear mass density is not constant.

Analyze In this case, we replace dm in Equation 9.32 by λdx , where $\lambda = \alpha x$.

Use Equation 9.32 to find an expression for x_{CM} :

$$x_{\text{CM}} = \frac{1}{M} \int x dm = \frac{1}{M} \int_0^L x \lambda dx = \frac{1}{M} \int_0^L x \alpha x dx \\ = \frac{\alpha}{M} \int_0^L x^2 dx = \frac{\alpha L^3}{3M}$$

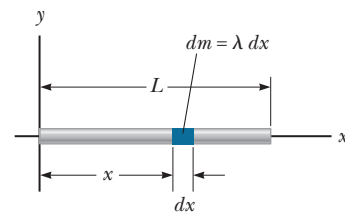


Figure 9.19 (Example 9.11) The geometry used to find the center of mass of a uniform rod.

9.11 continued

Find the total mass of the rod:

$$M = \int dm = \int_0^L \lambda dx = \int_0^L \alpha x dx = \frac{\alpha L^2}{2}$$

Substitute M into the expression for x_{CM} :

$$x_{\text{CM}} = \frac{\alpha L^3}{3\alpha L^2/2} = \frac{2}{3}L$$

Finalize Notice that the center of mass in part (B) is farther to the right than that in part (A). That result is reasonable because the elements of the rod become more massive as one moves to the right along the rod in part (B).

Example 9.12 The Center of Mass of a Right Triangle

You have been asked to hang a metal sign from a single vertical string. The sign has the triangular shape shown in Figure 9.20a. The bottom of the sign is to be parallel to the ground. At what distance from the left end of the sign should you attach the support string?

SOLUTION

Conceptualize Figure 9.20a shows the sign hanging from the string. The string must be attached at a point directly above the center of gravity of the sign, which is the same as its center of mass because it is in a uniform gravitational field.

Categorize As in the case of Example 9.11, we categorize this example as an analysis problem because it is necessary to identify infinitesimal mass elements of the sign to perform the integration in Equation 9.32.

Analyze We assume the triangular sign has a uniform density and total mass M . Because the sign is a continuous distribution of mass, we must use the integral expression in Equation 9.32 to find the x coordinate of the center of mass.

We divide the triangle into narrow strips of width dx and height y as shown in Figure 9.20b, where y is the height of the hypotenuse of the triangle above the x axis for a given value of x . The mass of each strip is the product of the volume of the strip and the density ρ of the material from which the sign is made: $dm = \rho y t dx$, where t is the thickness of the metal sign. The density of the material is the total mass of the sign divided by its total volume (area of the triangle times thickness).

Evaluate dm :

$$dm = \rho y t dx = \left(\frac{M}{\frac{1}{2}abt} \right) y t dx = \frac{2My}{ab} dx$$

Use Equation 9.32 to find the x coordinate of the center of mass:

$$(1) \quad x_{\text{CM}} = \frac{1}{M} \int x dm = \frac{1}{M} \int_0^a x \frac{2My}{ab} dx = \frac{2}{ab} \int_0^a xy dx$$

To proceed further and evaluate the integral, we must express y in terms of x . The line representing the hypotenuse of the triangle in Figure 9.20b has a slope of b/a and passes through the origin, so the equation of this line is $y = (b/a)x$.

Substitute for y in Equation (1):

$$\begin{aligned} x_{\text{CM}} &= \frac{2}{ab} \int_0^a x \left(\frac{b}{a} x \right) dx = \frac{2}{a^2} \int_0^a x^2 dx = \frac{2}{a^2} \left[\frac{x^3}{3} \right]_0^a \\ &= \frac{2}{3}a \end{aligned}$$

Therefore, the string must be attached to the sign at a distance two-thirds of the length of the bottom edge from the left end.

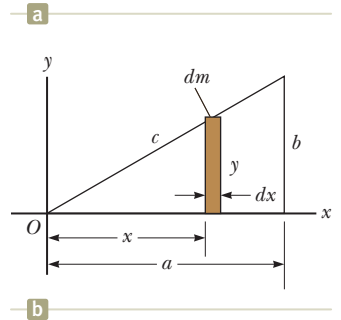


Figure 9.20 (Example 9.12) (a) A triangular sign to be hung from a single string. (b) Geometric construction for locating the center of mass.

continued

9.12 continued

Finalize This answer is identical to that in part (B) of Example 9.11. For the triangular sign, the linear increase in height y with position x means that elements in the sign increase in mass linearly along the x axis, just like the linear increase in mass density in Example 9.11. We could also find the y coordinate of the center of mass of the sign, but that is not needed to determine where the string should be attached. You might try cutting a right triangle out of cardboard and hanging it from a string so that the long base is horizontal. Does the string need to be attached at $\frac{2}{3}a$?

9.7 Systems of Many Particles

Consider a system of two or more particles for which we have identified the center of mass. We can begin to understand the physical significance and utility of the center of mass concept by taking the time derivative of the position vector for the center of mass given by Equation 9.31. From Section 4.1, we know that the time derivative of a position vector is by definition the velocity vector. Assuming M remains constant for a system of particles—that is, no particles enter or leave the system—we obtain the following expression for the **velocity of the center of mass** of the system:

Velocity of the center of mass of a system of particles

$$\vec{v}_{\text{CM}} = \frac{d\vec{r}_{\text{CM}}}{dt} = \frac{1}{M} \sum_i m_i \frac{d\vec{r}_i}{dt} = \frac{1}{M} \sum_i m_i \vec{v}_i \quad (9.35)$$

where \vec{v}_i is the velocity of the i th particle. Rearranging Equation 9.35 gives

Total momentum of a system of particles

$$M\vec{v}_{\text{CM}} = \sum_i m_i \vec{v}_i = \sum_i \vec{p}_i = \vec{p}_{\text{tot}} \quad (9.36)$$

Therefore, the total linear momentum of the system equals the total mass multiplied by the velocity of the center of mass. In other words, the total linear momentum of the system is equal to that of a single particle of mass M moving with a velocity \vec{v}_{CM} .

Differentiating Equation 9.35 with respect to time, we obtain the **acceleration of the center of mass** of the system:

Acceleration of the center of mass of a system of particles

$$\vec{a}_{\text{CM}} = \frac{d\vec{v}_{\text{CM}}}{dt} = \frac{1}{M} \sum_i m_i \frac{d\vec{v}_i}{dt} = \frac{1}{M} \sum_i m_i \vec{a}_i \quad (9.37)$$

Rearranging this expression and using Newton's second law gives

$$M\vec{a}_{\text{CM}} = \sum_i m_i \vec{a}_i = \sum_i \vec{F}_i \quad (9.38)$$

where \vec{F}_i is the net force on particle i .

The forces on any particle in the system may include both external forces (from outside the system) and internal forces (from within the system). By Newton's third law, however, the internal force exerted by particle 1 on particle 2, for example, is equal in magnitude and opposite in direction to the internal force exerted by particle 2 on particle 1. Therefore, when we sum over all internal force vectors in Equation 9.38, they cancel in pairs and we find that the net force on the system is caused *only* by external forces. We can then write Equation 9.38 in the form

Newton's second law for a system of particles

$$\sum \vec{F}_{\text{ext}} = M\vec{a}_{\text{CM}} \quad (9.39)$$

That is, the net external force on a system of particles equals the total mass of the system multiplied by the acceleration of the center of mass. Comparing Equation 9.39 with Newton's second law for a single particle, we see that the particle model we have used in several chapters can be described in terms of the center of mass:

The center of mass of a system of particles having combined mass M moves like an equivalent particle of mass M would move under the influence of the net external force on the system.

Let us integrate Equation 9.39 over a finite time interval:

$$\int \sum \vec{\mathbf{F}}_{\text{ext}} dt = \int M \vec{\mathbf{a}}_{\text{CM}} dt = \int M \frac{d\vec{\mathbf{v}}_{\text{CM}}}{dt} dt = M \int d\vec{\mathbf{v}}_{\text{CM}} = M \Delta \vec{\mathbf{v}}_{\text{CM}}$$

Notice that this equation can be written as

$$\Delta \vec{\mathbf{p}}_{\text{tot}} = \vec{\mathbf{I}} \quad (9.40)$$

◀ Impulse–momentum theorem for a system of particles

where $\vec{\mathbf{I}}$ is the impulse imparted to the system by external forces and $\vec{\mathbf{p}}_{\text{tot}}$ is the momentum of the system. Equation 9.40 is the generalization of the impulse–momentum theorem for a particle (Eq. 9.13) to a system of many particles. It is also the mathematical representation of the nonisolated system (momentum) model for a system of many particles.

Finally, if the net external force on a system is zero so that the system is isolated, it follows from Equation 9.39 that

$$M \vec{\mathbf{a}}_{\text{CM}} = M \frac{d\vec{\mathbf{v}}_{\text{CM}}}{dt} = 0$$

Therefore, the isolated system model for momentum for a system of many particles is described by

$$\Delta \vec{\mathbf{p}}_{\text{tot}} = 0 \quad (9.41)$$

which can be rewritten as

$$M \vec{\mathbf{v}}_{\text{CM}} = \vec{\mathbf{p}}_{\text{tot}} = \text{constant} \quad (\text{when } \sum \vec{\mathbf{F}}_{\text{ext}} = 0) \quad (9.42)$$

That is, the total linear momentum of a system of particles is conserved if no net external force is acting on the system. It follows that for an isolated system of particles, both the total momentum and the velocity of the center of mass are constant in time. This statement is a generalization of the isolated system (momentum) model for a many-particle system.

Suppose the center of mass of an isolated system consisting of two or more members is at rest. The center of mass of the system remains at rest if there is no net force on the system. For example, consider a system of a swimmer standing on a raft, with the system initially at rest. When the swimmer dives horizontally off the raft, the raft moves in the direction opposite that of the swimmer and the center of mass of the system remains at rest (if we neglect friction between raft and water). Furthermore, the linear momentum of the diver is equal in magnitude to that of the raft, but opposite in direction.

- Quick Quiz 9.8** A cruise ship is moving at constant speed through the water. The vacationers on the ship are eager to arrive at their next destination. They decide to try to speed up the cruise ship by gathering at the bow (the front) and running together toward the stern (the back) of the ship. **(i)** While they are running toward the stern, is the speed of the ship (a) higher than it was before, (b) unchanged, (c) lower than it was before, or (d) impossible to determine? **(ii)** The vacationers stop running when they reach the stern of the ship. After they have all stopped running, is the speed of the ship (a) higher than it was before they started running, (b) unchanged from what it was before they started running, (c) lower than it was before they started running, or (d) impossible to determine?

Conceptual Example 9.13

Exploding Projectile

A projectile fired into the air suddenly explodes into several fragments (Fig. 9.21 on page 274).

- (A)** What can be said about the motion of the center of mass of the system made up of all the fragments after the explosion?

continued

▶ 9.13 continued

SOLUTION

Neglecting air resistance, the only external force on the projectile is the gravitational force. Therefore, if the projectile did not explode, it would continue to move along the parabolic path indicated by the dashed line in Figure 9.21. Because the forces caused by the explosion are internal, they do not affect the motion of the center of mass of the system (the fragments). Therefore, after the explosion, the center of mass of the fragments follows the same parabolic path the projectile would have followed if no explosion had occurred.

(B) If the projectile did not explode, it would land at a distance R from its launch point. Suppose the projectile explodes and splits into two pieces of equal mass. One piece lands at a distance $2R$ to the right of the launch point. Where does the other piece land?

SOLUTION

As discussed in part (A), the center of mass of the two-piece system lands at a distance R from the launch point. One of the pieces lands at a farther distance R from the landing point (or a distance $2R$ from the launch point), to the right in Figure 9.21. Because the two pieces have the same mass, the other piece must land a distance R to the left of the landing point in Figure 9.21, which places this piece right back at the launch point!

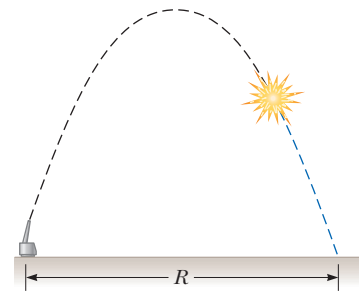


Figure 9.21 (Conceptual Example 9.13) When a projectile explodes into several fragments, the center of mass of the system made up of all the fragments follows the same parabolic path the projectile would have taken had there been no explosion.

Example 9.14 The Exploding Rocket **AM**

A rocket is fired vertically upward. At the instant it reaches an altitude of 1 000 m and a speed of $v_i = 300$ m/s, it explodes into three fragments having equal mass. One fragment moves upward with a speed of $v_1 = 450$ m/s following the explosion. The second fragment has a speed of $v_2 = 240$ m/s and is moving east right after the explosion. What is the velocity of the third fragment immediately after the explosion?

SOLUTION

Conceptualize Picture the explosion in your mind, with one piece going upward and a second piece moving horizontally toward the east. Do you have an intuitive feeling about the direction in which the third piece moves?

Categorize This example is a two-dimensional problem because we have two fragments moving in perpendicular directions after the explosion as well as a third fragment moving in an unknown direction in the plane defined by the velocity vectors of the other two fragments. We assume the time interval of the explosion is very short, so we use the impulse approximation in which we ignore the gravitational force and air resistance. Because the forces of the explosion are internal to the system (the rocket), the rocket is an *isolated system* in terms of *momentum*. Therefore, the total momentum \vec{p}_i of the rocket immediately before the explosion must equal the total momentum \vec{p}_f of the fragments immediately after the explosion.

Analyze Because the three fragments have equal mass, the mass of each fragment is $M/3$, where M is the total mass of the rocket. We will let \vec{v}_3 represent the unknown velocity of the third fragment.

Use the isolated system (momentum) model to equate the initial and final momenta of the system and express the momenta in terms of masses and velocities:

$$\Delta \vec{p} = 0 \rightarrow \vec{p}_i = \vec{p}_f \rightarrow M\vec{v}_i = \frac{M}{3}\vec{v}_1 + \frac{M}{3}\vec{v}_2 + \frac{M}{3}\vec{v}_3$$

Solve for \vec{v}_3 :

$$\vec{v}_3 = 3\vec{v}_i - \vec{v}_1 - \vec{v}_2$$

Substitute the numerical values:

$$\vec{v}_3 = 3(300\hat{j} \text{ m/s}) - (450\hat{j} \text{ m/s}) - (240\hat{i} \text{ m/s}) = (-240\hat{i} + 450\hat{j}) \text{ m/s}$$

Finalize Notice that this event is the reverse of a perfectly inelastic collision. There is one object before the collision and three objects afterward. Imagine running a movie of the event backward: the three objects would come together and become a single object. In a perfectly inelastic collision, the kinetic energy of the system decreases. If you were

▶ 9.14 continued

to calculate the kinetic energy before and after the event in this example, you would find that the kinetic energy of the system increases. (Try it!) This increase in kinetic energy comes from the potential energy stored in whatever fuel exploded to cause the breakup of the rocket.

9.8 Deformable Systems

So far in our discussion of mechanics, we have analyzed the motion of particles or nondeformable systems that can be modeled as particles. The discussion in Section 9.7 can be applied to an analysis of the motion of deformable systems. For example, suppose you stand on a skateboard and push off a wall, setting yourself in motion away from the wall. Your body has deformed during this event: your arms were bent before the event, and they straightened out while you pushed off the wall. How would we describe this event?

The force from the wall on your hands moves through no displacement; the force is always located at the interface between the wall and your hands. Therefore, the force does no work on the system, which is you and your skateboard. Pushing off the wall, however, does indeed result in a change in the kinetic energy of the system. If you try to use the work–kinetic energy theorem, $W = \Delta K$, to describe this event, you will notice that the left side of the equation is zero but the right side is not zero. The work–kinetic energy theorem is not valid for this event and is often not valid for systems that are deformable.

To analyze the motion of deformable systems, we appeal to Equation 8.2, the conservation of energy equation, and Equation 9.40, the impulse–momentum theorem. For the example of you pushing off the wall on your skateboard, identifying the system as you and the skateboard, Equation 8.2 gives

$$\Delta E_{\text{system}} = \sum T \rightarrow \Delta K + \Delta U = 0$$

where ΔK is the change in kinetic energy, which is related to the increased speed of the system, and ΔU is the decrease in potential energy stored in the body from previous meals. This equation tells us that the system transformed potential energy into kinetic energy by virtue of the muscular exertion necessary to push off the wall. Notice that the system is isolated in terms of energy but nonisolated in terms of momentum.

Applying Equation 9.40 to the system in this situation gives us

$$\Delta \vec{p}_{\text{tot}} = \vec{I} \rightarrow m \Delta \vec{v} = \int \vec{F}_{\text{wall}} dt$$

where \vec{F}_{wall} is the force exerted by the wall on your hands, m is the mass of you and the skateboard, and $\Delta \vec{v}$ is the change in the velocity of the system during the event. To evaluate the right side of this equation, we would need to know how the force from the wall varies in time. In general, this process might be complicated. In the case of constant forces, or well-behaved forces, however, the integral on the right side of the equation can be evaluated.

Example 9.15 Pushing on a Spring³ **AM**

As shown in Figure 9.22a (page 276), two blocks are at rest on a frictionless, level table. Both blocks have the same mass m , and they are connected by a spring of negligible mass. The separation distance of the blocks when the spring is relaxed is L . During a time interval Δt , a constant force of magnitude F is applied horizontally to the left block,

³Example 9.15 was inspired in part by C. E. Mungan, “A primer on work–energy relationships for introductory physics,” *The Physics Teacher* **43**:10, 2005.

9.15 continued

moving it through a distance x_1 as shown in Figure 9.22b. During this time interval, the right block moves through a distance x_2 . At the end of this time interval, the force F is removed.

(A) Find the resulting speed \vec{v}_{CM} of the center of mass of the system.

SOLUTION

Conceptualize Imagine what happens as you push on the left block. It begins to move to the right in Figure 9.22, and the spring begins to compress. As a result, the spring pushes to the right on the right block, which begins to move to the right. At any given time, the blocks are generally moving with different velocities. As the center of mass of the system moves to the right with a constant speed after the force is removed, the two blocks oscillate back and forth with respect to the center of mass.

Categorize We apply three analysis models in this problem: the deformable system of two blocks and a spring is modeled as a *nonisolated system* in terms of *energy* because work is being done on it by the applied force. It is also modeled as a *nonisolated system* in terms of *momentum* because of the force acting on the system during a time interval. Because the applied force on the system is constant, the acceleration of its center of mass is constant and the center of mass is modeled as a *particle under constant acceleration*.

Analyze Using the nonisolated system (momentum) model, we apply the impulse–momentum theorem to the system of two blocks, recognizing that the force F is constant during the time interval Δt while the force is applied.

Write Equation 9.40 for the system:

$$\Delta p_x = I_x \rightarrow (2m)(v_{\text{CM}} - 0) = F \Delta t$$

$$(1) \quad 2mv_{\text{CM}} = F \Delta t$$

During the time interval Δt , the center of mass of the system moves a distance $\frac{1}{2}(x_1 + x_2)$. Use this fact to express the time interval in terms of $v_{\text{CM,avg}}$:

$$\Delta t = \frac{\frac{1}{2}(x_1 + x_2)}{v_{\text{CM,avg}}}$$

Because the center of mass is modeled as a particle under constant acceleration, the average velocity of the center of mass is the average of the initial velocity, which is zero, and the final velocity v_{CM} :

$$\Delta t = \frac{\frac{1}{2}(x_1 + x_2)}{\frac{1}{2}(0 + v_{\text{CM}})} = \frac{(x_1 + x_2)}{v_{\text{CM}}}$$

Substitute this expression into Equation (1):

$$2mv_{\text{CM}} = F \frac{(x_1 + x_2)}{v_{\text{CM}}}$$

Solve for v_{CM} :

$$v_{\text{CM}} = \sqrt{F \frac{(x_1 + x_2)}{2m}}$$

(B) Find the total energy of the system associated with vibration relative to its center of mass after the force F is removed.

SOLUTION

Analyze The vibrational energy is all the energy of the system other than the kinetic energy associated with translational motion of the center of mass. To find the vibrational energy, we apply the conservation of energy equation. The kinetic energy of the system can be expressed as $K = K_{\text{CM}} + K_{\text{vib}}$, where K_{vib} is the kinetic energy of the blocks relative to the center of mass due to their vibration. The potential energy of the system is U_{vib} , which is the potential energy stored in the spring when the separation of the blocks is some value other than L .

From the nonisolated system (energy) model, express Equation 8.2 for this system:

$$(2) \quad \Delta K_{\text{CM}} + \Delta K_{\text{vib}} + \Delta U_{\text{vib}} = W$$

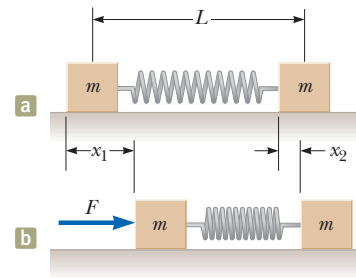


Figure 9.22 (Example 9.15) (a) Two blocks of equal mass are connected by a spring. (b) The left block is pushed with a constant force of magnitude F and moves a distance x_1 during some time interval. During this same time interval, the right block moves through a distance x_2 .

► 9.15 continued

Express Equation (2) in an alternate form, noting that $K_{\text{vib}} + U_{\text{vib}} = E_{\text{vib}}$:

The initial values of the kinetic energy of the center of mass and the vibrational energy of the system are zero. Use this fact and substitute for the work done on the system by the force F :

Solve for the vibrational energy and use the result from part (A):

$$\Delta K_{\text{CM}} + \Delta E_{\text{vib}} = W$$

$$K_{\text{CM}} + E_{\text{vib}} = W = Fx_1$$

$$E_{\text{vib}} = Fx_1 - K_{\text{CM}} = Fx_1 - \frac{1}{2}(2m)v_{\text{CM}}^2 = F \frac{(x_1 - x_2)}{2}$$

Finalize Neither of the two answers in this example depends on the spring length, the spring constant, or the time interval. Notice also that the magnitude x_1 of the displacement of the point of application of the applied force is different from the magnitude $\frac{1}{2}(x_1 + x_2)$ of the displacement of the center of mass of the system. This difference reminds us that the displacement in the definition of work (Eq. 7.1) is that of the point of application of the force.

9.9 Rocket Propulsion

When ordinary vehicles such as cars are propelled, the driving force for the motion is friction. In the case of the car, the driving force is the force exerted by the road on the car. We can model the car as a nonisolated system in terms of momentum. An impulse is applied to the car from the roadway, and the result is a change in the momentum of the car as described by Equation 9.40.

A rocket moving in space, however, has no road to push against. The rocket is an isolated system in terms of momentum. Therefore, the source of the propulsion of a rocket must be something other than an external force. The operation of a rocket depends on the law of conservation of linear momentum as applied to an isolated system, where the system is the rocket plus its ejected fuel.

Rocket propulsion can be understood by first considering our archer standing on frictionless ice in Example 9.1. Imagine the archer fires several arrows horizontally. For each arrow fired, the archer receives a compensating momentum in the opposite direction. As more arrows are fired, the archer moves faster and faster across the ice. In addition to this analysis in terms of momentum, we can also understand this phenomenon in terms of Newton's second and third laws. Every time the bow pushes an arrow forward, the arrow pushes the bow (and the archer) backward, and these forces result in an acceleration of the archer.

In a similar manner, as a rocket moves in free space, its linear momentum changes when some of its mass is ejected in the form of exhaust gases. Because the gases are given momentum when they are ejected out of the engine, the rocket receives a compensating momentum in the opposite direction. Therefore, the rocket is accelerated as a result of the "push," or thrust, from the exhaust gases. In free space, the center of mass of the system (rocket plus expelled gases) moves uniformly, independent of the propulsion process.⁴

Suppose at some time t the magnitude of the momentum of a rocket plus its fuel is $(M + \Delta m)v$, where v is the speed of the rocket relative to the Earth (Fig. 9.23a). Over a short time interval Δt , the rocket ejects fuel of mass Δm . At the end of this interval, the rocket's mass is M and its speed is $v + \Delta v$, where Δv is the change in speed of the rocket (Fig. 9.23b). If the fuel is ejected with a speed v_e relative to



Courtesy of NASA

The force from a nitrogen-propelled hand-controlled device allows an astronaut to move about freely in space without restrictive tethers, using the thrust force from the expelled nitrogen.

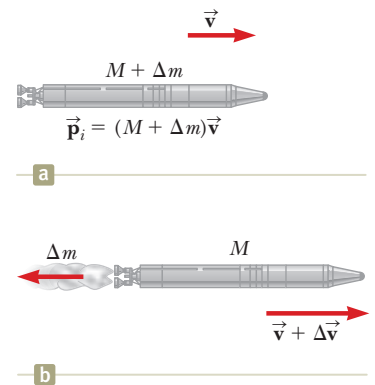


Figure 9.23 Rocket propulsion. (a) The initial mass of the rocket plus all its fuel is $M + \Delta m$ at a time t , and its speed is v . (b) At a time $t + \Delta t$, the rocket's mass has been reduced to M and an amount of fuel Δm has been ejected. The rocket's speed increases by an amount Δv .

⁴The rocket and the archer represent cases of the reverse of a perfectly inelastic collision: momentum is conserved, but the kinetic energy of the rocket–exhaust gas system increases (at the expense of chemical potential energy in the fuel), as does the kinetic energy of the archer–arrow system (at the expense of potential energy from the archer's previous meals).

the rocket (the subscript e stands for *exhaust*, and v_e is usually called the *exhaust speed*), the velocity of the fuel relative to the Earth is $v - v_e$. Because the system of the rocket and the ejected fuel is isolated, we apply the isolated system model for momentum and obtain

$$\Delta p = 0 \rightarrow p_i = p_f \rightarrow (M + \Delta m)v = M(v + \Delta v) + \Delta m(v - v_e)$$

Simplifying this expression gives

$$M \Delta v = v_e \Delta m$$

If we now take the limit as Δt goes to zero, we let $\Delta v \rightarrow dv$ and $\Delta m \rightarrow dm$. Furthermore, the increase in the exhaust mass dm corresponds to an equal decrease in the rocket mass, so $dm = -dM$. Notice that dM is negative because it represents a decrease in mass, so $-dM$ is a positive number. Using this fact gives

$$M dv = v_e dm = -v_e dM \quad (9.43)$$

Now divide the equation by M and integrate, taking the initial mass of the rocket plus fuel to be M_i and the final mass of the rocket plus its remaining fuel to be M_f . The result is

$$\int_{v_i}^{v_f} dv = -v_e \int_{M_i}^{M_f} \frac{dM}{M}$$

$$v_f - v_i = v_e \ln\left(\frac{M_i}{M_f}\right) \quad (9.44)$$

Expression for rocket
propulsion ▶

which is the basic expression for rocket propulsion. First, Equation 9.44 tells us that the increase in rocket speed is proportional to the exhaust speed v_e of the ejected gases. Therefore, the exhaust speed should be very high. Second, the increase in rocket speed is proportional to the natural logarithm of the ratio M_i/M_f . Therefore, this ratio should be as large as possible; that is, the mass of the rocket without its fuel should be as small as possible and the rocket should carry as much fuel as possible.

The **thrust** on the rocket is the force exerted on it by the ejected exhaust gases. We obtain the following expression for the thrust from Newton's second law and Equation 9.43:

$$\text{Thrust} = M \frac{dv}{dt} = \left| v_e \frac{dM}{dt} \right| \quad (9.45)$$

This expression shows that the thrust increases as the exhaust speed increases and as the rate of change of mass (called the *burn rate*) increases.

Example 9.16 Fighting a Fire

Two firefighters must apply a total force of 600 N to steady a hose that is discharging water at the rate of 3 600 L/min. Estimate the speed of the water as it exits the nozzle.

SOLUTION

Conceptualize As the water leaves the hose, it acts in a way similar to the gases being ejected from a rocket engine. As a result, a force (thrust) acts on the firefighters in a direction opposite the direction of motion of the water. In this case, we want the end of the hose to be modeled as a particle in equilibrium rather than to accelerate as in the case of the rocket. Consequently, the firefighters must apply a force of magnitude equal to the thrust in the opposite direction to keep the end of the hose stationary.

Categorize This example is a substitution problem in which we use given values in an equation derived in this section. The water exits at 3 600 L/min, which is 60 L/s. Knowing that 1 L of water has a mass of 1 kg, we estimate that about 60 kg of water leaves the nozzle each second.

▶ 9.16 continued

Use Equation 9.45 for the thrust:

$$\text{Thrust} = \left| v_e \frac{dM}{dt} \right|$$

Solve for the exhaust speed:

$$v_e = \frac{\text{Thrust}}{|dM/dt|}$$

Substitute numerical values:

$$v_e = \frac{600 \text{ N}}{60 \text{ kg/s}} = 10 \text{ m/s}$$

Example 9.17 A Rocket in Space

A rocket moving in space, far from all other objects, has a speed of 3.0×10^3 m/s relative to the Earth. Its engines are turned on, and fuel is ejected in a direction opposite the rocket's motion at a speed of 5.0×10^3 m/s relative to the rocket.

(A) What is the speed of the rocket relative to the Earth once the rocket's mass is reduced to half its mass before ignition?

SOLUTION

Conceptualize Figure 9.23 shows the situation in this problem. From the discussion in this section and scenes from science fiction movies, we can easily imagine the rocket accelerating to a higher speed as the engine operates.

Categorize This problem is a substitution problem in which we use given values in the equations derived in this section.

Solve Equation 9.44 for the final velocity and substitute the known values:

$$\begin{aligned} v_f &= v_i + v_e \ln\left(\frac{M_i}{M_f}\right) \\ &= 3.0 \times 10^3 \text{ m/s} + (5.0 \times 10^3 \text{ m/s}) \ln\left(\frac{M_i}{0.50M_i}\right) \\ &= 6.5 \times 10^3 \text{ m/s} \end{aligned}$$

(B) What is the thrust on the rocket if it burns fuel at the rate of 50 kg/s?

SOLUTION

Use Equation 9.45, noting that $dM/dt = 50$ kg/s:

$$\text{Thrust} = \left| v_e \frac{dM}{dt} \right| = (5.0 \times 10^3 \text{ m/s})(50 \text{ kg/s}) = 2.5 \times 10^5 \text{ N}$$

Summary

Definitions

▶ The **linear momentum** \vec{p} of a particle of mass m moving with a velocity \vec{v} is

$$\vec{p} \equiv m\vec{v} \quad (9.2)$$

▶ The **impulse** imparted to a particle by a net force $\sum \vec{F}$ is equal to the time integral of the force:

$$\vec{I} \equiv \int_{t_i}^{t_f} \sum \vec{F} dt \quad (9.9)$$

continued

■ An **inelastic collision** is one for which the total kinetic energy of the system of colliding particles is not conserved. A **perfectly inelastic collision** is one in which the colliding particles stick together after the collision. An **elastic collision** is one in which the kinetic energy of the system is conserved.

■ The position vector of the **center of mass** of a system of particles is defined as

$$\vec{r}_{\text{CM}} \equiv \frac{1}{M} \sum_i m_i \vec{r}_i \quad (9.31)$$

where $M = \sum_i m_i$ is the total mass of the system and \vec{r}_i is the position vector of the i th particle.

Concepts and Principles

■ The position vector of the center of mass of an extended object can be obtained from the integral expression

$$\vec{r}_{\text{CM}} = \frac{1}{M} \int \vec{r} \, dm \quad (9.34)$$

The velocity of the center of mass for a system of particles is

$$\vec{v}_{\text{CM}} = \frac{1}{M} \sum_i m_i \vec{v}_i \quad (9.35)$$

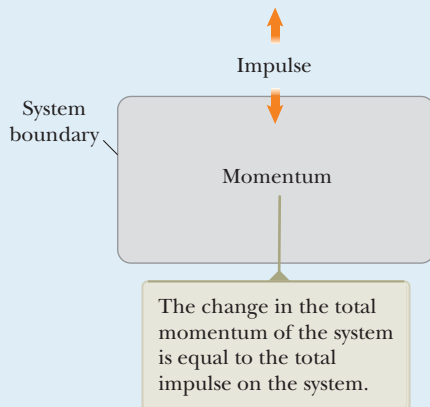
The total momentum of a system of particles equals the total mass multiplied by the velocity of the center of mass.

■ Newton's second law applied to a system of particles is

$$\sum \vec{F}_{\text{ext}} = M \vec{a}_{\text{CM}} \quad (9.39)$$

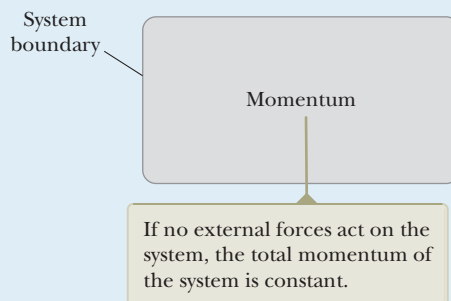
where \vec{a}_{CM} is the acceleration of the center of mass and the sum is over all external forces. The center of mass moves like an imaginary particle of mass M under the influence of the resultant external force on the system.

Analysis Models for Problem Solving



■ **Nonisolated System (Momentum).** If a system interacts with its environment in the sense that there is an external force on the system, the behavior of the system is described by the **impulse–momentum theorem**:

$$\Delta \vec{p}_{\text{tot}} = \vec{I} \quad (9.40)$$



■ **Isolated System (Momentum).** The total momentum of an isolated system (no external forces) is conserved regardless of the nature of the forces between the members of the system:

$$\Delta \vec{p}_{\text{tot}} = 0 \quad (9.41)$$

The system may be isolated in terms of momentum but nonisolated in terms of energy, as in the case of inelastic collisions.

Objective Questions

1. denotes answer available in *Student Solutions Manual/Study Guide*

- You are standing on a saucer-shaped sled at rest in the middle of a frictionless ice rink. Your lab partner throws you a heavy Frisbee. You take different actions in successive experimental trials. Rank the following situations according to your final speed from largest to smallest. If your final speed is the same in two cases, give them equal rank. (a) You catch the Frisbee and hold onto it. (b) You catch the Frisbee and throw it back to your partner. (c) You bobble the catch, just touching the Frisbee so that it continues in its original direction more slowly. (d) You catch the Frisbee and throw it so that it moves vertically upward above your head. (e) You catch the Frisbee and set it down so that it remains at rest on the ice.
- A boxcar at a rail yard is set into motion at the top of a hump. The car rolls down quietly and without friction onto a straight, level track where it couples with a flatcar of smaller mass, originally at rest, so that the two cars then roll together without friction. Consider the two cars as a system from the moment of release of the boxcar until both are rolling together. Answer the following questions yes or no. (a) Is mechanical energy of the system conserved? (b) Is momentum of the system conserved? Next, consider only the process of the boxcar gaining speed as it rolls down the hump. For the boxcar and the Earth as a system, (c) is mechanical energy conserved? (d) Is momentum conserved? Finally, consider the two cars as a system as the boxcar is slowing down in the coupling process. (e) Is mechanical energy of this system conserved? (f) Is momentum of this system conserved?
- A massive tractor is rolling down a country road. In a perfectly inelastic collision, a small sports car runs into the machine from behind. (i) Which vehicle experiences a change in momentum of larger magnitude? (a) The car does. (b) The tractor does. (c) Their momentum changes are the same size. (d) It could be either vehicle. (ii) Which vehicle experiences a larger change in kinetic energy? (a) The car does. (b) The tractor does. (c) Their kinetic energy changes are the same size. (d) It could be either vehicle.
- A 2-kg object moving to the right with a speed of 4 m/s makes a head-on, elastic collision with a 1-kg object that is initially at rest. The velocity of the 1-kg object after the collision is (a) greater than 4 m/s, (b) less than 4 m/s, (c) equal to 4 m/s, (d) zero, or (e) impossible to say based on the information provided.
- A 5-kg cart moving to the right with a speed of 6 m/s collides with a concrete wall and rebounds with a speed of 2 m/s. What is the change in momentum of the cart? (a) 0 (b) $40 \text{ kg} \cdot \text{m/s}$ (c) $-40 \text{ kg} \cdot \text{m/s}$ (d) $-30 \text{ kg} \cdot \text{m/s}$ (e) $-10 \text{ kg} \cdot \text{m/s}$
- A 57.0-g tennis ball is traveling straight at a player at 21.0 m/s. The player volleys the ball straight back at 25.0 m/s. If the ball remains in contact with the racket for 0.060 s, what average force acts on the ball? (a) 22.6 N (b) 32.5 N (c) 43.7 N (d) 72.1 N (e) 102 N
- The momentum of an object is increased by a factor of 4 in magnitude. By what factor is its kinetic energy changed? (a) 16 (b) 8 (c) 4 (d) 2 (e) 1
- The kinetic energy of an object is increased by a factor of 4. By what factor is the magnitude of its momentum changed? (a) 16 (b) 8 (c) 4 (d) 2 (e) 1
- If two particles have equal momenta, are their kinetic energies equal? (a) yes, always (b) no, never (c) no, except when their speeds are the same (d) yes, as long as they move along parallel lines
- If two particles have equal kinetic energies, are their momenta equal? (a) yes, always (b) no, never (c) yes, as long as their masses are equal (d) yes, if both their masses and directions of motion are the same (e) yes, as long as they move along parallel lines
- A 10.0-g bullet is fired into a 200-g block of wood at rest on a horizontal surface. After impact, the block slides 8.00 m before coming to rest. If the coefficient of friction between the block and the surface is 0.400, what is the speed of the bullet before impact? (a) 106 m/s (b) 166 m/s (c) 226 m/s (d) 286 m/s (e) none of those answers is correct
- Two particles of different mass start from rest. The same net force acts on both of them as they move over equal distances. How do their final kinetic energies compare? (a) The particle of larger mass has more kinetic energy. (b) The particle of smaller mass has more kinetic energy. (c) The particles have equal kinetic energies. (d) Either particle might have more kinetic energy.
- Two particles of different mass start from rest. The same net force acts on both of them as they move over equal distances. How do the magnitudes of their final momenta compare? (a) The particle of larger mass has more momentum. (b) The particle of smaller mass has more momentum. (c) The particles have equal momenta. (d) Either particle might have more momentum.
- A basketball is tossed up into the air, falls freely, and bounces from the wooden floor. From the moment after the player releases it until the ball reaches the top of its bounce, what is the smallest system for which momentum is conserved? (a) the ball (b) the ball plus player (c) the ball plus floor (d) the ball plus the Earth (e) momentum is not conserved for any system
- A 3-kg object moving to the right on a frictionless, horizontal surface with a speed of 2 m/s collides head-on and sticks to a 2-kg object that is initially moving to the left with a speed of 4 m/s. After the collision, which statement is true? (a) The kinetic energy of the system is 20 J. (b) The momentum of the system is $14 \text{ kg} \cdot \text{m/s}$. (c) The kinetic energy of the system is greater than 5 J but less than 20 J. (d) The momentum of the system is $-2 \text{ kg} \cdot \text{m/s}$. (e) The momentum of the system is less than the momentum of the system before the collision.

16. A ball is suspended by a string that is tied to a fixed point above a wooden block standing on end. The ball is pulled back as shown in Figure OQ9.16 and released. In trial A, the ball rebounds elastically from the block. In trial B, two-sided tape causes the ball to stick to the block. In which case is the ball more likely to knock the block over? (a) It is more likely in trial A. (b) It is more likely in trial B. (c) It makes no difference. (d) It could be either case, depending on other factors.
17. A car of mass m traveling at speed v crashes into the rear of a truck of mass $2m$ that is at rest and in neutral at an intersection. If the collision is perfectly inelastic,

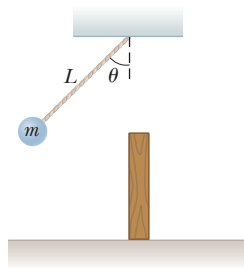


Figure OQ9.16

what is the speed of the combined car and truck after the collision? (a) v (b) $v/2$ (c) $v/3$ (d) $2v$ (e) None of those answers is correct.

18. A head-on, elastic collision occurs between two billiard balls of equal mass. If a red ball is traveling to the right with speed v and a blue ball is traveling to the left with speed $3v$ before the collision, what statement is true concerning their velocities subsequent to the collision? Neglect any effects of spin. (a) The red ball travels to the left with speed v , while the blue ball travels to the right with speed $3v$. (b) The red ball travels to the left with speed $3v$, while the blue ball continues to move to the left with a speed $2v$. (c) The red ball travels to the left with speed $3v$, while the blue ball travels to the right with speed v . (d) Their final velocities cannot be determined because momentum is not conserved in the collision. (e) The velocities cannot be determined without knowing the mass of each ball.

Conceptual Questions

I. denotes answer available in *Student Solutions Manual/Study Guide*

- An airbag in an automobile inflates when a collision occurs, which protects the passenger from serious injury (see the photo on page 254). Why does the airbag soften the blow? Discuss the physics involved in this dramatic photograph.
- In golf, novice players are often advised to be sure to “follow through” with their swing. Why does this advice make the ball travel a longer distance? If a shot is taken near the green, very little follow-through is required. Why?
- An open box slides across a frictionless, icy surface of a frozen lake. What happens to the speed of the box as water from a rain shower falls vertically downward into the box? Explain.
- While in motion, a pitched baseball carries kinetic energy and momentum. (a) Can we say that it carries a force that it can exert on any object it strikes? (b) Can the baseball deliver more kinetic energy to the bat and batter than the ball carries initially? (c) Can the baseball deliver to the bat and batter more momentum than the ball carries initially? Explain each of your answers.
- You are standing perfectly still and then take a step forward. Before the step, your momentum was zero, but afterward you have some momentum. Is the principle of conservation of momentum violated in this case? Explain your answer.
- A sharpshooter fires a rifle while standing with the butt of the gun against her shoulder. If the forward momentum of a bullet is the same as the backward momentum of the gun, why isn't it as dangerous to be hit by the gun as by the bullet?
- Two students hold a large bed sheet vertically between them. A third student, who happens to be the star pitcher on the school baseball team, throws a raw egg at the center of the sheet. Explain why the egg does not break when it hits the sheet, regardless of its initial speed.
- A juggler juggles three balls in a continuous cycle. Any one ball is in contact with one of his hands for one fifth of the time. (a) Describe the motion of the center of mass of the three balls. (b) What average force does the juggler exert on one ball while he is touching it?
- (a) Does the center of mass of a rocket in free space accelerate? Explain. (b) Can the speed of a rocket exceed the exhaust speed of the fuel? Explain.
- On the subject of the following positions, state your own view and argue to support it. (a) The best theory of motion is that force causes acceleration. (b) The true measure of a force's effectiveness is the work it does, and the best theory of motion is that work done on an object changes its energy. (c) The true measure of a force's effect is impulse, and the best theory of motion is that impulse imparted to an object changes its momentum.
- Does a larger net force exerted on an object always produce a larger change in the momentum of the object compared with a smaller net force? Explain.
- Does a larger net force always produce a larger change in kinetic energy than a smaller net force? Explain.
- A bomb, initially at rest, explodes into several pieces. (a) Is linear momentum of the system (the bomb before the explosion, the pieces after the explosion) conserved? Explain. (b) Is kinetic energy of the system conserved? Explain.

Problems

ENHANCED

WebAssign

The problems found in this chapter may be assigned online in Enhanced WebAssign

1. straightforward; 2. intermediate; 3. challenging

1. full solution available in the *Student Solutions Manual/Study Guide*

AMT

Analysis Model tutorial available in Enhanced WebAssign

GP

Guided Problem

M

Master It tutorial available in Enhanced WebAssign

W

Watch It video solution available in Enhanced WebAssign

Section 9.1 Linear Momentum

- A particle of mass m moves with momentum of magnitude p . (a) Show that the kinetic energy of the particle is $K = p^2/2m$. (b) Express the magnitude of the particle's momentum in terms of its kinetic energy and mass.
- An object has a kinetic energy of 275 J and a momentum of magnitude 25.0 kg · m/s. Find the speed and mass of the object.
- At one instant, a 17.5-kg sled is moving over a horizontal surface of snow at 3.50 m/s. After 8.75 s has elapsed, the sled stops. Use a momentum approach to find the average friction force acting on the sled while it was moving.
- A 3.00-kg particle has a velocity of $(3.00\hat{i} - 4.00\hat{j})$ m/s. (a) Find its x and y components of momentum. (b) Find the magnitude and direction of its momentum.
- A baseball approaches home plate at a speed of 45.0 m/s, moving horizontally just before being hit by a bat. The batter hits a pop-up such that after hitting the bat, the baseball is moving at 55.0 m/s straight up. The ball has a mass of 145 g and is in contact with the bat for 2.00 ms. What is the average vector force the ball exerts on the bat during their interaction?

Section 9.2 Analysis Model: Isolated System (Momentum)

6. A 45.0-kg girl is standing on a 150-kg plank. Both are originally at rest on a frozen lake that constitutes a frictionless, flat surface. The girl begins to walk along the plank at a constant velocity of $1.50\hat{i}$ m/s relative to the plank. (a) What is the velocity of the plank relative to the ice surface? (b) What is the girl's velocity relative to the ice surface?

M
7. A girl of mass m_g is standing on a plank of mass m_p . Both are originally at rest on a frozen lake that constitutes a frictionless, flat surface. The girl begins to walk along the plank at a constant velocity v_{gp} to the right relative to the plank. (The subscript gp denotes the girl relative to plank.) (a) What is the velocity v_{pi} of the plank relative to the surface of the ice? (b) What is the girl's velocity v_{gi} relative to the ice surface?
8. A 65.0-kg boy and his 40.0-kg sister, both wearing roller blades, face each other at rest. The girl pushes the boy hard, sending him backward with velocity 2.90 m/s toward the west. Ignore friction. (a) Describe the subsequent motion of the girl. (b) How much potential energy in the girl's body is converted into mechanical

energy of the boy–girl system? (c) Is the momentum of the boy–girl system conserved in the pushing-apart process? If so, explain how that is possible considering (d) there are large forces acting and (e) there is no motion beforehand and plenty of motion afterward.

9. In research in cardiology and exercise physiology, it is often important to know the mass of blood pumped by a person's heart in one stroke. This information can be obtained by means of a *ballistocardiograph*. The instrument works as follows. The subject lies on a horizontal pallet floating on a film of air. Friction on the pallet is negligible. Initially, the momentum of the system is zero. When the heart beats, it expels a mass m of blood into the aorta with speed v , and the body and platform move in the opposite direction with speed V . The blood velocity can be determined independently (e.g., by observing the Doppler shift of ultrasound). Assume that it is 50.0 cm/s in one typical trial. The mass of the subject plus the pallet is 54.0 kg. The pallet moves 6.00×10^{-5} m in 0.160 s after one heartbeat. Calculate the mass of blood that leaves the heart. Assume that the mass of blood is negligible compared with the total mass of the person. (This simplified example illustrates the principle of ballistocardiography, but in practice a more sophisticated model of heart function is used.)
10. When you jump straight up as high as you can, what is the order of magnitude of the maximum recoil speed that you give to the Earth? Model the Earth as a perfectly solid object. In your solution, state the physical quantities you take as data and the values you measure or estimate for them.

11. Two blocks of masses m and $3m$ are placed on a frictionless, horizontal surface. A light spring is attached to the more massive block, and the blocks are pushed together with the spring between them (Fig. P9.11). A cord initially holding the blocks together is burned; after that happens, the block of mass $3m$ moves to the right with a speed of 2.00 m/s. (a) What is the velocity of the block of mass m ? (b) Find the system's original elastic potential energy, taking $m = 0.350$ kg. (c) Is the original energy

W

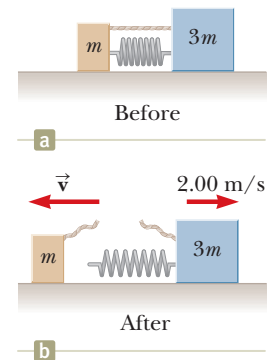


Figure P9.11

in the spring or in the cord? (d) Explain your answer to part (c). (e) Is the momentum of the system conserved in the bursting-apart process? Explain how that is possible considering (f) there are large forces acting and (g) there is no motion beforehand and plenty of motion afterward?

Section 9.3 Analysis Model: Nonisolated System (Momentum)

12. A man claims that he can hold onto a 12.0-kg child in a head-on collision as long as he has his seat belt on. Consider this man in a collision in which he is in one of two identical cars each traveling toward the other at 60.0 mi/h relative to the ground. The car in which he rides is brought to rest in 0.10 s. (a) Find the magnitude of the average force needed to hold onto the child. (b) Based on your result to part (a), is the man's claim valid? (c) What does the answer to this problem say about laws requiring the use of proper safety devices such as seat belts and special toddler seats?

13. **W** An estimated force–time curve for a baseball struck by a bat is shown in Figure P9.13. From this curve, determine (a) the magnitude of the impulse delivered to the ball and (b) the average force exerted on the ball.

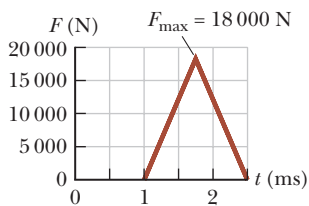


Figure P9.13

14. **Review.** After a 0.300-kg rubber ball is dropped from a height of 1.75 m, it bounces off a concrete floor and rebounds to a height of 1.50 m. (a) Determine the magnitude and direction of the impulse delivered to the ball by the floor. (b) Estimate the time the ball is in contact with the floor and use this estimate to calculate the average force the floor exerts on the ball.

15. A glider of mass m is free to slide along a horizontal air track. It is pushed against a launcher at one end of the track. Model the launcher as a light spring of force constant k compressed by a distance x . The glider is released from rest. (a) Show that the glider attains a speed of $v = x(k/m)^{1/2}$. (b) Show that the magnitude of the impulse imparted to the glider is given by the expression $I = x(km)^{1/2}$. (c) Is more work done on a cart with a large or a small mass?

16. In a slow-pitch softball game, a 0.200-kg softball crosses the plate at 15.0 m/s at an angle of 45.0° below the horizontal. The batter hits the ball toward center field, giving it a velocity of 40.0 m/s at 30.0° above the horizontal. (a) Determine the impulse delivered to the ball. (b) If the force on the ball increases linearly for 4.00 ms, holds constant for 20.0 ms, and then decreases linearly to zero in another 4.00 ms, what is the maximum force on the ball?

17. **M** The front 1.20 m of a 1 400-kg car is designed as a “crumple zone” that collapses to absorb the shock of a collision. If a car traveling 25.0 m/s stops uniformly in 1.20 m, (a) how long does the collision last, (b) what is the magnitude of the average force on the car, and

(c) what is the acceleration of the car? Express the acceleration as a multiple of the acceleration due to gravity.

18. **AMT** A tennis player receives a shot with the ball (0.060 0 kg) traveling horizontally at 20.0 m/s and returns the shot with the ball traveling horizontally at 40.0 m/s in the opposite direction. (a) What is the impulse delivered to the ball by the tennis racket? (b) Some work is done on the system of the ball and some energy appears in the ball as an increase in internal energy during the collision between the ball and the racket. What is the sum $W - \Delta E_{\text{int}}$ for the ball?

19. The magnitude of the net force exerted in the x direction on a 2.50-kg particle varies in time as shown in Figure P9.19. Find (a) the impulse of the force over the 5.00-s time interval, (b) the final velocity the particle attains if it is originally at rest, (c) its final velocity if its original velocity is $-2.00 \hat{i}$ m/s, and (d) the average force exerted on the particle for the time interval between 0 and 5.00 s.

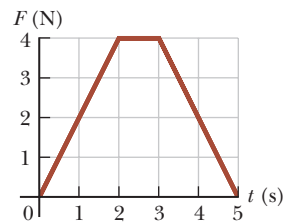


Figure P9.19

20. **Review.** A *force platform* is a tool used to analyze the performance of athletes by measuring the vertical force the athlete exerts on the ground as a function of time. Starting from rest, a 65.0-kg athlete jumps down onto the platform from a height of 0.600 m. While she is in contact with the platform during the time interval $0 < t < 0.800$ s, the force she exerts on it is described by the function

$$F = 9\,200t - 11\,500t^2$$

where F is in newtons and t is in seconds. (a) What impulse did the athlete receive from the platform? (b) With what speed did she reach the platform? (c) With what speed did she leave it? (d) To what height did she jump upon leaving the platform?

21. Water falls without splashing at a rate of 0.250 L/s from a height of 2.60 m into a 0.750-kg bucket on a scale. If the bucket is originally empty, what does the scale read in newtons 3.00 s after water starts to accumulate in it?

Section 9.4 Collisions in One Dimension

22. A 1 200-kg car traveling initially at $v_{Ci} = 25.0$ m/s in an easterly direction crashes into the back of a 9 000-kg truck moving in the same direction at $v_{Ti} = 20.0$ m/s (Fig. P9.22). The velocity of the car immediately after the collision is $v_{Cf} = 18.0$ m/s to the east. (a) What is the velocity of the truck immediately after the collision?

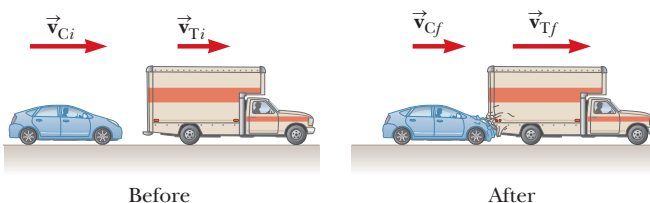


Figure P9.22

sion? (b) What is the change in mechanical energy of the car–truck system in the collision? (c) Account for this change in mechanical energy.

- 23.** **W** A 10.0-g bullet is fired into a stationary block of wood having mass $m = 5.00$ kg. The bullet imbeds into the block. The speed of the bullet-plus-wood combination immediately after the collision is 0.600 m/s. What was the original speed of the bullet?
- 24.** A car of mass m moving at a speed v_1 collides and couples with the back of a truck of mass $2m$ moving initially in the same direction as the car at a lower speed v_2 . (a) What is the speed v_f of the two vehicles immediately after the collision? (b) What is the change in kinetic energy of the car–truck system in the collision?
- 25.** A railroad car of mass 2.50×10^4 kg is moving with a speed of 4.00 m/s. It collides and couples with three other coupled railroad cars, each of the same mass as the single car and moving in the same direction with an initial speed of 2.00 m/s. (a) What is the speed of the four cars after the collision? (b) How much mechanical energy is lost in the collision?
- 26.** Four railroad cars, each of mass 2.50×10^4 kg, are coupled together and coasting along horizontal tracks at speed v_i toward the south. A very strong but foolish movie actor, riding on the second car, uncouples the front car and gives it a big push, increasing its speed to 4.00 m/s southward. The remaining three cars continue moving south, now at 2.00 m/s. (a) Find the initial speed of the four cars. (b) By how much did the potential energy within the body of the actor change? (c) State the relationship between the process described here and the process in Problem 25.
- 27.** **M** A neutron in a nuclear reactor makes an elastic, head-on collision with the nucleus of a carbon atom initially at rest. (a) What fraction of the neutron's kinetic energy is transferred to the carbon nucleus? (b) The initial kinetic energy of the neutron is 1.60×10^{-13} J. Find its final kinetic energy and the kinetic energy of the carbon nucleus after the collision. (The mass of the carbon nucleus is nearly 12.0 times the mass of the neutron.)
- 28.** A 7.00-g bullet, when fired from a gun into a 1.00-kg block of wood held in a vise, penetrates the block to a depth of 8.00 cm. This block of wood is next placed on a frictionless horizontal surface, and a second 7.00-g bullet is fired from the gun into the block. To what depth will the bullet penetrate the block in this case?

- 29.** **M** A tennis ball of mass 57.0 g is held just above a basketball of mass 590 g. With their centers vertically aligned, both balls are released from rest at the same time, to fall through a distance of 1.20 m, as shown in Figure P9.29. (a) Find the magnitude of the downward velocity with which the basketball reaches the ground. (b) Assume that an elastic collision with the ground instantaneously reverses the velocity of the basketball while the tennis ball is still moving down. Next, the two balls meet in an elastic collision. To what height does the tennis ball rebound?




Figure P9.29

- 30.** As shown in Figure P9.30, a bullet of mass m and speed v passes completely through a pendulum bob of mass M . The bullet emerges with a speed of $v/2$. The pendulum bob is suspended by a stiff rod (not a string) of length ℓ and negligible mass. What is the minimum value of v such that the pendulum bob will barely swing through a complete vertical circle?

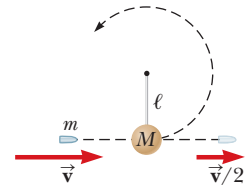


Figure P9.30

- 31.** **AMT** A 12.0-g wad of sticky clay is hurled horizontally at a 100-g wooden block initially at rest on a horizontal surface. The clay sticks to the block. After impact, the block slides 7.50 m before coming to rest. If the coefficient of friction between the block and the surface is 0.650, what was the speed of the clay immediately before impact?
- 32.** A wad of sticky clay of mass m is hurled horizontally at a wooden block of mass M initially at rest on a horizontal surface. The clay sticks to the block. After impact, the block slides a distance d before coming to rest. If the coefficient of friction between the block and the surface is μ , what was the speed of the clay immediately before impact?
- 33.** **AMT** **W** Two blocks are free to slide along the frictionless, wooden track shown in Figure P9.33. The block of mass $m_1 = 5.00$ kg is released from the position shown, at height $h = 5.00$ m above the flat part of the track. Protruding from its front end is the north pole of a strong magnet, which repels the north pole of an identical magnet embedded in the back end of the block of mass $m_2 = 10.0$ kg, initially at rest. The two blocks never touch. Calculate the maximum height to which m_1 rises after the elastic collision.

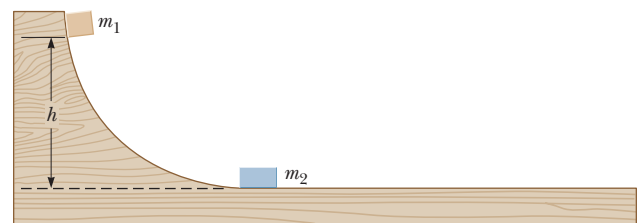


Figure P9.33

- 34.** (a) Three carts of masses $m_1 = 4.00$ kg, $m_2 = 10.0$ kg, and $m_3 = 3.00$ kg move on a frictionless, horizontal track with speeds of $v_1 = 5.00$ m/s to the right, $v_2 = 3.00$ m/s to the right, and $v_3 = 4.00$ m/s to the left as shown in Figure P9.34. Velcro couplers make the carts stick together after colliding. Find the final velocity of the train of three carts. (b) **What If?** Does your answer in part (a) require that all the carts collide and stick

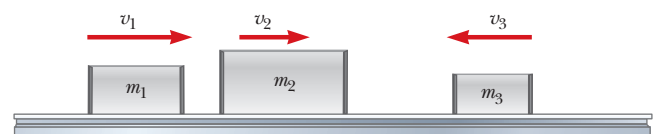


Figure P9.34

together at the same moment? What if they collide in a different order?

Section 9.5 Collisions in Two Dimensions

35. A 0.300-kg puck, initially at rest on a horizontal, frictionless surface, is struck by a 0.200-kg puck moving initially along the x axis with a speed of 2.00 m/s. After the collision, the 0.200-kg puck has a speed of 1.00 m/s at an angle of $\theta = 53.0^\circ$ to the positive x axis (see Figure 9.11). (a) Determine the velocity of the 0.300-kg puck after the collision. (b) Find the fraction of kinetic energy transferred away or transformed to other forms of energy in the collision.

36. Two automobiles of equal mass approach an intersection. One vehicle is traveling with speed 13.0 m/s toward the east, and the other is traveling north with speed v_{2i} . Neither driver sees the other. The vehicles collide in the intersection and stick together, leaving parallel skid marks at an angle of 55.0° north of east. The speed limit for both roads is 35 mi/h, and the driver of the northward-moving vehicle claims he was within the speed limit when the collision occurred. Is he telling the truth? Explain your reasoning.

37. An object of mass 3.00 kg, moving with an initial velocity of $5.00\hat{i}$ m/s, collides with and sticks to an object of mass 2.00 kg with an initial velocity of $-3.00\hat{j}$ m/s. Find the final velocity of the composite object.

38. Two shuffleboard disks of equal mass, one orange and the other yellow, are involved in an elastic, glancing collision. The yellow disk is initially at rest and is struck by the orange disk moving with a speed of 5.00 m/s. After the collision, the orange disk moves along a direction that makes an angle of 37.0° with its initial direction of motion. The velocities of the two disks are perpendicular after the collision. Determine the final speed of each disk.

39. Two shuffleboard disks of equal mass, one orange and the other yellow, are involved in an elastic, glancing collision. The yellow disk is initially at rest and is struck by the orange disk moving with a speed v_i . After the collision, the orange disk moves along a direction that makes an angle θ with its initial direction of motion. The velocities of the two disks are perpendicular after the collision. Determine the final speed of each disk.

40. A proton, moving with a velocity of $v_i\hat{i}$, collides elastically with another proton that is initially at rest. Assuming that the two protons have equal speeds after the collision, find (a) the speed of each proton after the collision in terms of v_i and (b) the direction of the velocity vectors after the collision.

41. A billiard ball moving at 5.00 m/s strikes a stationary ball of the same mass. After the collision, the first ball moves at 4.33 m/s at an angle of 30.0° with respect to the original line of motion. Assuming an elastic collision (and ignoring friction and rotational motion), find the struck ball's velocity after the collision.

42. A 90.0-kg fullback running east with a speed of 5.00 m/s is tackled by a 95.0-kg opponent running north with a speed of 3.00 m/s. (a) Explain why the successful tackle

constitutes a perfectly inelastic collision. (b) Calculate the velocity of the players immediately after the tackle. (c) Determine the mechanical energy that disappears as a result of the collision. Account for the missing energy.

43. An unstable atomic nucleus of mass 17.0×10^{-27} kg initially at rest disintegrates into three particles. One of the particles, of mass 5.00×10^{-27} kg, moves in the y direction with a speed of 6.00×10^6 m/s. Another particle, of mass 8.40×10^{-27} kg, moves in the x direction with a speed of 4.00×10^6 m/s. Find (a) the velocity of the third particle and (b) the total kinetic energy increase in the process.

44. The mass of the blue puck in Figure P9.44 is 20.0% greater than the mass of the green puck. Before colliding, the pucks approach each other with momenta of equal magnitudes and opposite directions, and the green puck has an initial speed of 10.0 m/s. Find the speeds the pucks have after the collision if half the kinetic energy of the system becomes internal energy during the collision.

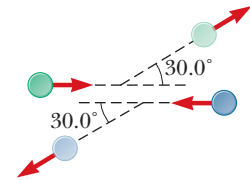


Figure P9.44

Section 9.6 The Center of Mass

45. Four objects are situated along the y axis as follows: a 2.00-kg object is at +3.00 m, a 3.00-kg object is at +2.50 m, a 2.50-kg object is at the origin, and a 4.00-kg object is at -0.500 m. Where is the center of mass of these objects?

46. The mass of the Earth is 5.97×10^{24} kg, and the mass of the Moon is 7.35×10^{22} kg. The distance of separation, measured between their centers, is 3.84×10^8 m. Locate the center of mass of the Earth–Moon system as measured from the center of the Earth.

47. Explorers in the jungle find an ancient monument in the shape of a large isosceles triangle as shown in Figure P9.47. The monument is made from tens of thousands of small stone blocks of density $3\,800$ kg/m³. The monument is 15.7 m high and 64.8 m wide at its base and is everywhere 3.60 m thick from front to back. Before the monument was built many years ago, all the stone blocks lay on the ground. How much work did laborers do on the blocks to put them in position while building the entire monument? *Note:* The gravitational potential energy of an object–Earth system is given by $U_g = Mgy_{CM}$, where M is the total mass of the object and y_{CM} is the elevation of its center of mass above the chosen reference level.

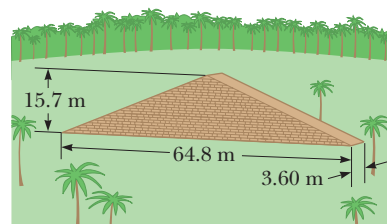


Figure P9.47

48. A uniform piece of sheet metal is shaped as shown in Figure P9.48. Compute the x and y coordinates of the center of mass of the piece.

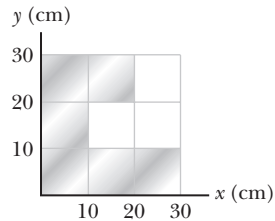


Figure P9.48

49. A rod of length 30.0 cm has linear density (mass per length) given by

$$\lambda = 50.0 + 20.0x$$

where x is the distance from one end, measured in meters, and λ is in grams/meter. (a) What is the mass of the rod? (b) How far from the $x = 0$ end is its center of mass?

50. A water molecule consists of an oxygen atom with two hydrogen atoms bound to it (Fig. P9.50). The angle between the two bonds is 106° . If the bonds are 0.100 nm long, where is the center of mass of the molecule?

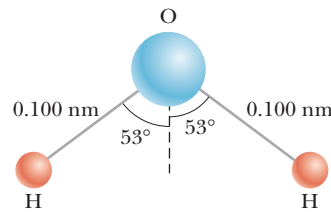


Figure P9.50

Section 9.7 Systems of Many Particles

51. A 2.00-kg particle has a velocity $(2.00\hat{i} - 3.00\hat{j})$ m/s, and a 3.00-kg particle has a velocity $(1.00\hat{i} + 6.00\hat{j})$ m/s. Find (a) the velocity of the center of mass and (b) the total momentum of the system.

52. Consider a system of two particles in the xy plane: $m_1 = 2.00$ kg is at the location $\vec{r}_1 = (1.00\hat{i} + 2.00\hat{j})$ m and has a velocity of $(3.00\hat{i} + 0.500\hat{j})$ m/s; $m_2 = 3.00$ kg is at $\vec{r}_2 = (-4.00\hat{i} - 3.00\hat{j})$ m and has velocity $(3.00\hat{i} - 2.00\hat{j})$ m/s. (a) Plot these particles on a grid or graph paper. Draw their position vectors and show their velocities. (b) Find the position of the center of mass of the system and mark it on the grid. (c) Determine the velocity of the center of mass and also show it on the diagram. (d) What is the total linear momentum of the system?

53. Romeo (77.0 kg) entertains Juliet (55.0 kg) by playing his guitar from the rear of their boat at rest in still water, 2.70 m away from Juliet, who is in the front of the boat. After the serenade, Juliet carefully moves to the rear of the boat (away from shore) to plant a kiss on Romeo's cheek. How far does the 80.0-kg boat move toward the shore it is facing?

54. The vector position of a 3.50-g particle moving in the xy plane varies in time according to $\vec{r}_1 = (3\hat{i} + 3\hat{j})t + 2\hat{j}t^2$, where t is in seconds and \vec{r} is in centimeters. At the same time, the vector position of a 5.50 g particle varies as $\vec{r}_2 = 3\hat{i} - 2\hat{i}t^2 - 6\hat{j}t$. At $t = 2.50$ s, determine (a) the vector position of the center of mass, (b) the linear momentum of the system, (c) the velocity of the center of mass, (d) the acceleration of the center of mass, and (e) the net force exerted on the two-particle system.

55. A ball of mass 0.200 kg with a velocity of $1.50\hat{i}$ m/s meets a ball of mass 0.300 kg with a velocity of $-0.400\hat{i}$ m/s in a head-on, elastic collision. (a) Find their velocities

after the collision. (b) Find the velocity of their center of mass before and after the collision.

Section 9.8 Deformable Systems

56. For a technology project, a student has built a vehicle, of total mass 6.00 kg, that moves itself. As shown in Figure P9.56, it runs on four light wheels. A reel is attached to one of the axles, and a cord originally wound on the reel goes up over a pulley attached to the vehicle to support an elevated load. After the vehicle is released from rest, the load descends very slowly, unwinding the cord to turn the axle and make the vehicle move forward (to the left in Fig. P9.56). Friction is negligible in the pulley and axle bearings. The wheels do not slip on the floor. The reel has been constructed with a conical shape so that the load descends at a constant low speed while the vehicle moves horizontally across the floor with constant acceleration, reaching a final velocity of $3.00\hat{i}$ m/s. (a) Does the floor impart impulse to the vehicle? If so, how much? (b) Does the floor do work on the vehicle? If so, how much? (c) Does it make sense to say that the final momentum of the vehicle came from the floor? If not, where did it come from? (d) Does it make sense to say that the final kinetic energy of the vehicle came from the floor? If not, where did it come from? (e) Can we say that one particular force causes the forward acceleration of the vehicle? What does cause it?

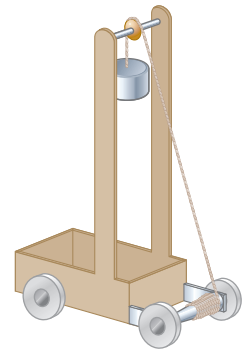


Figure P9.56

57. A particle is suspended from a post on top of a cart by a light string of length L as shown in Figure P9.57a. The cart and particle are initially moving to the right at constant speed v_i with the string vertical. The cart suddenly comes to rest when it runs into and sticks to a bumper as shown in Figure P9.57b. The suspended particle swings through an angle θ . (a) Show that the original speed of the cart can be computed from $v_i = \sqrt{2gL(1 - \cos \theta)}$. (b) If the bumper is still exerting a horizontal force on the cart when the hanging particle is at its maximum angle *forward* from the vertical, at what moment does the bumper *stop* exerting a horizontal force?

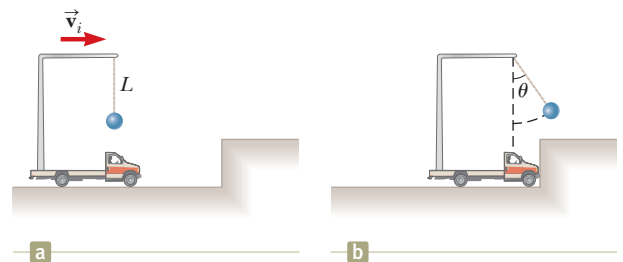


Figure P9.57

58. A 60.0-kg person bends his knees and then jumps straight up. After his feet leave the floor, his motion is

unaffected by air resistance and his center of mass rises by a maximum of 15.0 cm. Model the floor as completely solid and motionless. (a) Does the floor impart impulse to the person? (b) Does the floor do work on the person? (c) With what momentum does the person leave the floor? (d) Does it make sense to say that this momentum came from the floor? Explain. (e) With what kinetic energy does the person leave the floor? (f) Does it make sense to say that this energy came from the floor? Explain.

59. Figure P9.59a shows an overhead view of the initial configuration of two pucks of mass m on frictionless ice. The pucks are tied together with a string of length ℓ and negligible mass. At time $t = 0$, a constant force of magnitude F begins to pull to the right on the center point of the string. At time t , the moving pucks strike each other and stick together. At this time, the force has moved through a distance d , and the pucks have attained a speed v (Fig. P9.59b). (a) What is v in terms of F , d , ℓ , and m ? (b) How much of the energy transferred into the system by work done by the force has been transformed to internal energy?

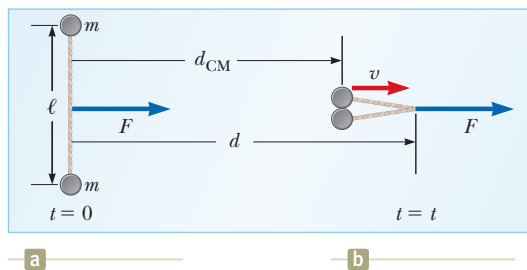


Figure P9.59

Section 9.9 Rocket Propulsion

60. A model rocket engine has an average thrust of 5.26 N. It has an initial mass of 25.5 g, which includes fuel mass of 12.7 g. The duration of its burn is 1.90 s. (a) What is the average exhaust speed of the engine? (b) This engine is placed in a rocket body of mass 53.5 g. What is the final velocity of the rocket if it were to be fired from rest in outer space by an astronaut on a spacewalk? Assume the fuel burns at a constant rate.

61. A garden hose is held as shown in Figure P9.61. The hose is originally full of motionless water. What additional force is necessary to hold the nozzle stationary after the water flow is turned on if the discharge rate is 0.600 kg/s with a speed of 25.0 m/s?



Figure P9.61

62. **Review.** The first stage of a Saturn V space vehicle consumed fuel and oxidizer at the rate of 1.50×10^4 kg/s with an exhaust speed of 2.60×10^3 m/s. (a) Calculate the thrust produced by this engine. (b) Find the acceleration the vehicle had just as it lifted off the launch

pad on the Earth, taking the vehicle's initial mass as 3.00×10^6 kg.

63. A rocket for use in deep space is to be capable of boosting a total load (payload plus rocket frame and engine) of 3.00 metric tons to a speed of 10 000 m/s. (a) It has an engine and fuel designed to produce an exhaust speed of 2 000 m/s. How much fuel plus oxidizer is required? (b) If a different fuel and engine design could give an exhaust speed of 5 000 m/s, what amount of fuel and oxidizer would be required for the same task? (c) Noting that the exhaust speed in part (b) is 2.50 times higher than that in part (a), explain why the required fuel mass is not simply smaller by a factor of 2.50.
64. A rocket has total mass $M_i = 360$ kg, including $M_f = 330$ kg of fuel and oxidizer. In interstellar space, it starts from rest at the position $x = 0$, turns on its engine at time $t = 0$, and puts out exhaust with relative speed $v_e = 1\,500$ m/s at the constant rate $k = 2.50$ kg/s. The fuel will last for a burn time of $T_b = M_f/k = 330$ kg/(2.5 kg/s) = 132 s. (a) Show that during the burn the velocity of the rocket as a function of time is given by

$$v(t) = -v_e \ln\left(1 - \frac{kt}{M_i}\right)$$

- (b) Make a graph of the velocity of the rocket as a function of time for times running from 0 to 132 s. (c) Show that the acceleration of the rocket is

$$a(t) = \frac{kv_e}{M_i - kt}$$

- (d) Graph the acceleration as a function of time. (e) Show that the position of the rocket is

$$x(t) = v_e \left(\frac{M_i}{k} - t \right) \ln \left(1 - \frac{kt}{M_i} \right) + v_e t$$

- (f) Graph the position during the burn as a function of time.

Additional Problems

65. A ball of mass m is thrown straight up into the air with an initial speed v_i . Find the momentum of the ball (a) at its maximum height and (b) halfway to its maximum height.
66. An amateur skater of mass M is trapped in the middle of an ice rink and is unable to return to the side where there is no ice. Every motion she makes causes her to slip on the ice and remain in the same spot. She decides to try to return to safety by throwing her gloves of mass m in the direction opposite the safe side. (a) She throws the gloves as hard as she can, and they leave her hand with a horizontal velocity \vec{v}_{gloves} . Explain whether or not she moves. If she does move, calculate her velocity \vec{v}_{girl} relative to the Earth after she throws the gloves. (b) Discuss her motion from the point of view of the forces acting on her.
67. **M** A 3.00-kg steel ball strikes a wall with a speed of 10.0 m/s at an angle of $\theta = 60.0^\circ$ with the surface. It bounces off with the same speed and angle (Fig. P9.67). If the

ball is in contact with the wall for 0.200 s, what is the average force exerted by the wall on the ball?

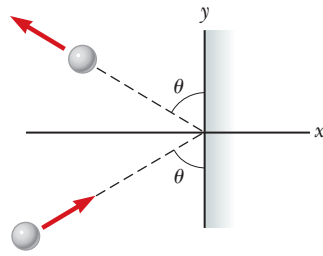


Figure P9.67

68. (a) Figure P9.68 shows three points in the operation of the ballistic pendulum discussed in Example 9.6 (and shown in Fig. 9.9b). The projectile approaches the pendulum in Figure P9.68a. Figure P9.68b shows the situation just after the projectile is captured in the pendulum. In Figure P9.68c, the pendulum arm has swung upward and come to rest at a height h above its initial position. Prove that the ratio of the kinetic energy of the projectile–pendulum system immediately after the collision to the kinetic energy immediately before is $m_1/(m_1 + m_2)$. (b) What is the ratio of the momentum of the system immediately after the collision to the momentum immediately before? (c) A student believes that such a large decrease in mechanical energy must be accompanied by at least a small decrease in momentum. How would you convince this student of the truth?

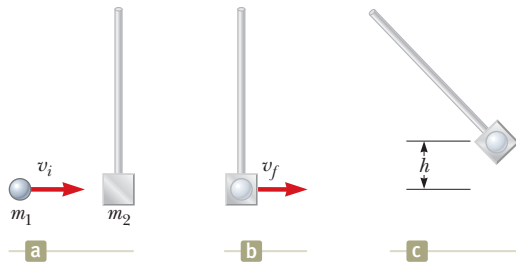


Figure P9.68 Problems 68 and 86. (a) A metal ball moves toward the pendulum. (b) The ball is captured by the pendulum. (c) The ball–pendulum combination swings up through a height h before coming to rest.

69. **Review.** A 60.0-kg person running at an initial speed of 4.00 m/s jumps onto a 120-kg cart initially at rest (Fig. P9.69). The person slides on the cart's top surface and finally comes to rest relative to the cart. The coefficient of kinetic friction between the person and the cart is 0.400. Friction between the cart and ground can be ignored. (a) Find the final velocity of the person and cart relative to the ground. (b) Find the friction force acting on the person while he is sliding across the top surface of the cart. (c) How long does the friction force act on the person? (d) Find the change in momentum of the person and the change in momentum of the cart. (e) Determine the displacement of the person relative to the ground while he is sliding on the cart. (f) Determine the displacement of the cart relative to the ground while the person is sliding. (g) Find the change in kinetic energy of the person. (h) Find the change in kinetic energy of the cart. (i) Explain why the answers to (g) and (h) differ. (What kind of collision is this one, and what accounts for the loss of mechanical energy?)

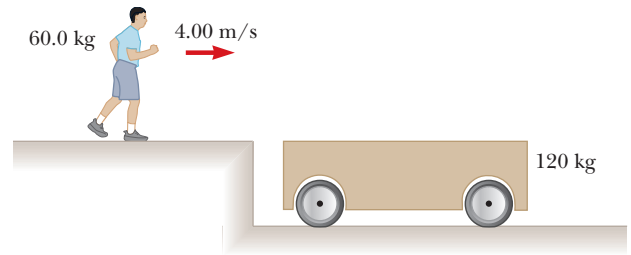


Figure P9.69

70. A cannon is rigidly attached to a carriage, which can move along horizontal rails but is connected to a post by a large spring, initially unstretched and with force constant $k = 2.00 \times 10^4$ N/m, as shown in Figure

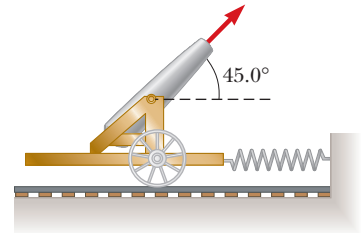


Figure P9.70

- P9.70. The cannon fires a 200-kg projectile at a velocity of 125 m/s directed 45.0° above the horizontal. (a) Assuming that the mass of the cannon and its carriage is 5 000 kg, find the recoil speed of the cannon. (b) Determine the maximum extension of the spring. (c) Find the maximum force the spring exerts on the carriage. (d) Consider the system consisting of the cannon, carriage, and projectile. Is the momentum of this system conserved during the firing? Why or why not?

71. A 1.25-kg wooden block rests on a table over a large hole as in Figure P9.71. A 5.00-g bullet with an initial velocity v_i is fired upward into the bottom of the block and remains in the block after the collision. The block and bullet rise

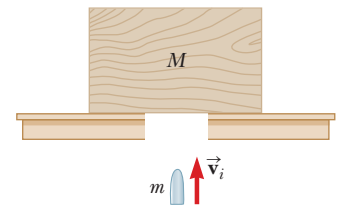


Figure P9.71

Problems 71 and 72.

- to a maximum height of 22.0 cm. (a) Describe how you would find the initial velocity of the bullet using ideas you have learned in this chapter. (b) Calculate the initial velocity of the bullet from the information provided.
72. A wooden block of mass M rests on a table over a large hole as in Figure 9.71. A bullet of mass m with an initial velocity of v_i is fired upward into the bottom of the block and remains in the block after the collision. The block and bullet rise to a maximum height of h . (a) Describe how you would find the initial velocity of the bullet using ideas you have learned in this chapter. (b) Find an expression for the initial velocity of the bullet.
73. Two particles with masses m and $3m$ are moving toward each other along the x axis with the same initial speeds v_i . The particle with mass m is traveling to the left, and particle with mass $3m$ is traveling to the right. They

undergo a head-on elastic collision, and each rebounds along the same line as it approached. Find the final speeds of the particles.

74. Pursued by ferocious wolves, you are in a sleigh with no horses, gliding without friction across an ice-covered lake. You take an action described by the equations

$$(270 \text{ kg})(7.50 \text{ m/s})\hat{i} = (15.0 \text{ kg})(-v_{1f}\hat{i}) + (255 \text{ kg})(v_{2f}\hat{i})$$

$$v_{1f} + v_{2f} = 8.00 \text{ m/s}$$

(a) Complete the statement of the problem, giving the data and identifying the unknowns. (b) Find the values of v_{1f} and v_{2f} . (c) Find the amount of energy that has been transformed from potential energy stored in your body to kinetic energy of the system.

75. Two gliders are set in motion on a horizontal air track. A spring of force constant k is attached to the back end of the second glider. As shown in Figure P9.75, the first glider, of mass m_1 , moves to the right with speed v_1 , and the second glider, of mass m_2 , moves more slowly to the right with speed v_2 . When m_1 collides with the spring attached to m_2 , the spring compresses by a distance x_{max} , and the gliders then move apart again. In terms of v_1 , v_2 , m_1 , m_2 , and k , find (a) the speed v at maximum compression, (b) the maximum compression x_{max} , and (c) the velocity of each glider after m_1 has lost contact with the spring.

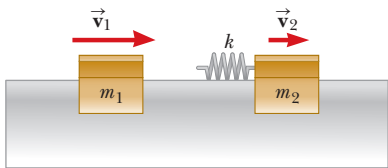


Figure P9.75

76. Why is the following situation impossible? An astronaut, together with the equipment he carries, has a mass of 150 kg. He is taking a space walk outside his spacecraft, which is drifting through space with a constant velocity. The astronaut accidentally pushes against the spacecraft and begins moving away at 20.0 m/s, relative to the spacecraft, without a tether. To return, he takes equipment off his space suit and throws it in the direction away from the spacecraft. Because of his bulky space suit, he can throw equipment at a maximum speed of 5.00 m/s relative to himself. After throwing enough equipment, he starts moving back to the spacecraft and is able to grab onto it and climb inside.

77. Two blocks of masses $m_1 = 2.00 \text{ kg}$ and $m_2 = 4.00 \text{ kg}$ are released from rest at a height of $h = 5.00 \text{ m}$ on a frictionless track as shown in Figure P9.77. When they



Figure P9.77

meet on the level portion of the track, they undergo a head-on, elastic collision. Determine the maximum heights to which m_1 and m_2 rise on the curved portion of the track after the collision.

78. **Review.** A metal cannonball of mass m rests next to a tree at the very edge of a cliff 36.0 m above the surface of the ocean. In an effort to knock the cannonball off the cliff, some children tie one end of a rope around a stone of mass 80.0 kg and the other end to a tree limb just above the cannonball. They tighten the rope so that the stone just clears the ground and hangs next to the cannonball. The children manage to swing the stone back until it is held at rest 1.80 m above the ground. The children release the stone, which then swings down and makes a head-on, elastic collision with the cannonball, projecting it horizontally off the cliff. The cannonball lands in the ocean a horizontal distance R away from its initial position. (a) Find the horizontal component R of the cannonball's displacement as it depends on m . (b) What is the maximum possible value for R , and (c) to what value of m does it correspond? (d) For the stone–cannonball–Earth system, is mechanical energy conserved throughout the process? Is this principle sufficient to solve the entire problem? Explain. (e) **What if?** Show that R does not depend on the value of the gravitational acceleration. Is this result remarkable? State how one might make sense of it.

79. A 0.400-kg blue bead slides on a frictionless, curved wire, starting from rest at point A in Figure P9.79, where $h = 1.50 \text{ m}$. At point B, the blue bead collides elastically with a 0.600-kg green bead at rest. Find the maximum height the green bead rises as it moves up the wire.

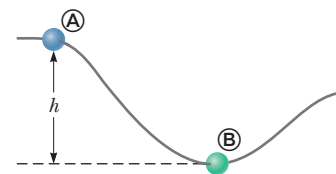


Figure P9.79

80. A small block of mass $m_1 = 0.500 \text{ kg}$ is released from rest at the top of a frictionless, curve-shaped wedge of mass $m_2 = 3.00 \text{ kg}$, which sits on a frictionless, horizontal surface as shown in Figure P9.80a. When the block leaves the wedge, its velocity is measured to be 4.00 m/s to the right as shown in Figure P9.80b. (a) What is the velocity of the wedge after the block reaches the horizontal surface? (b) What is the height h of the wedge?

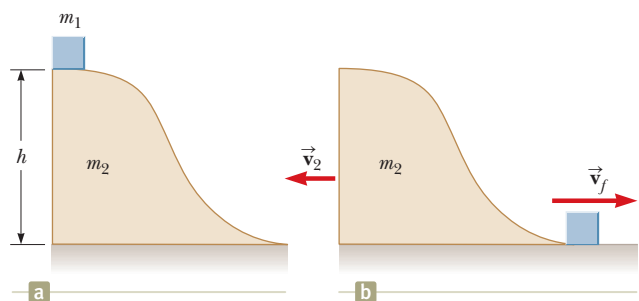


Figure P9.80

- 81. Review.** A bullet of mass $m = 8.00$ g is fired into a block **M** of mass $M = 250$ g that is initially at rest at the edge of a table of height $h = 1.00$ m (Fig. P9.81). The bullet remains in the block, and after the impact the block lands $d = 2.00$ m from the bottom of the table. Determine the initial speed of the bullet.

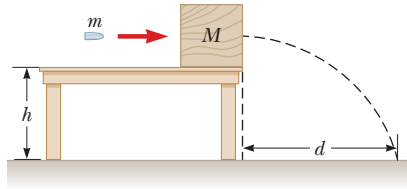


Figure P9.81 Problems 81 and 82.

- 82. Review.** A bullet of mass m is fired into a block of mass M initially at rest at the edge of a frictionless table of height h (Fig. P9.81). The bullet remains in the block, and after impact the block lands a distance d from the bottom of the table. Determine the initial speed of the bullet.
- 83.** A 0.500 -kg sphere moving with a velocity given by $(2.00\hat{i} - 3.00\hat{j} + 1.00\hat{k})$ m/s strikes another sphere of mass 1.50 kg moving with an initial velocity of $(-1.00\hat{i} + 2.00\hat{j} - 3.00\hat{k})$ m/s. (a) The velocity of the 0.500 -kg sphere after the collision is $(-1.00\hat{i} + 3.00\hat{j} - 8.00\hat{k})$ m/s. Find the final velocity of the 1.50 -kg sphere and identify the kind of collision (elastic, inelastic, or perfectly inelastic). (b) Now assume the velocity of the 0.500 -kg sphere after the collision is $(-0.250\hat{i} + 0.750\hat{j} - 2.00\hat{k})$ m/s. Find the final velocity of the 1.50 -kg sphere and identify the kind of collision. (c) **What If?** Take the velocity of the 0.500 -kg sphere after the collision as $(-1.00\hat{i} + 3.00\hat{j} + a\hat{k})$ m/s. Find the value of a and the velocity of the 1.50 -kg sphere after an elastic collision.
- 84.** A 75.0 -kg firefighter slides down a pole while a constant friction force of 300 N retards her motion. A horizontal 20.0 -kg platform is supported by a spring at the bottom of the pole to cushion the fall. The firefighter starts from rest 4.00 m above the platform, and the spring constant is $4\,000$ N/m. Find (a) the firefighter's speed just before she collides with the platform and (b) the maximum distance the spring is compressed. Assume the friction force acts during the entire motion.
- 85.** George of the Jungle, with mass m , swings on a light vine hanging from a stationary tree branch. A second vine of equal length hangs from the same point, and a gorilla of larger mass M swings in the opposite direction on it. Both vines are horizontal when the primates start from rest at the same moment. George and the gorilla meet at the lowest point of their swings. Each is afraid that one vine will break, so they grab each other and hang on. They swing upward together, reaching a point where the vines make an angle of 35.0° with the vertical. Find the value of the ratio m/M .

- 86. Review.** A student performs a ballistic pendulum experiment using an apparatus similar to that discussed in Example 9.6 and shown in Figure P9.68. She obtains the following average data: $h = 8.68$ cm, projec-

tile mass $m_1 = 68.8$ g, and pendulum mass $m_2 = 263$ g. (a) Determine the initial speed v_{1A} of the projectile. (b) The second part of her experiment is to obtain v_{1A} by firing the same projectile horizontally (with the pendulum removed from the path) and measuring its final horizontal position x and distance of fall y (Fig. P9.86). What numerical value does she obtain for v_{1A} based on her measured values of $x = 257$ cm and $y = 85.3$ cm? (c) What factors might account for the difference in this value compared with that obtained in part (a)?

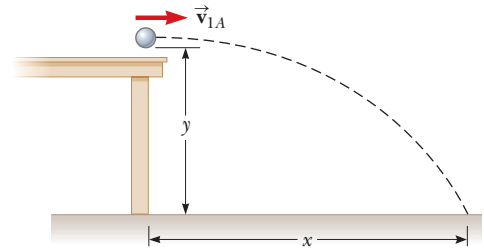


Figure P9.86

- 87. Review.** A light spring of force constant 3.85 N/m is compressed by 8.00 cm and held between a 0.250 -kg block on the left and a 0.500 -kg block on the right. Both blocks are at rest on a horizontal surface. The blocks are released simultaneously so that the spring tends to push them apart. Find the maximum velocity each block attains if the coefficient of kinetic friction between each block and the surface is (a) 0 , (b) 0.100 , and (c) 0.462 . Assume the coefficient of static friction is greater than the coefficient of kinetic friction in every case.
- 88.** Consider as a system the Sun with the Earth in a circular orbit around it. Find the magnitude of the change in the velocity of the Sun relative to the center of mass of the system over a six-month period. Ignore the influence of other celestial objects. You may obtain the necessary astronomical data from the endpapers of the book.

- 89. AMT M** A 5.00 -g bullet moving with an initial speed of $v_i = 400$ m/s is fired into and passes through a 1.00 -kg block as shown in Figure P9.89. The block, initially at rest on a frictionless, horizontal surface, is connected to a spring with force constant 900 N/m.

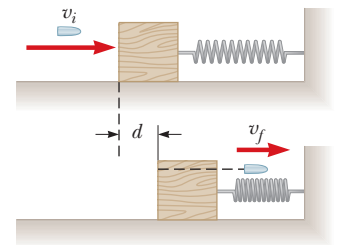


Figure P9.89

The block moves $d = 5.00$ cm to the right after impact before being brought to rest by the spring. Find (a) the speed at which the bullet emerges from the block and (b) the amount of initial kinetic energy of the bullet that is converted into internal energy in the bullet-block system during the collision.

- 90. Review.** There are (one can say) three coequal theories of motion for a single particle: Newton's second law, stating that the total force on the particle causes its

acceleration; the work–kinetic energy theorem, stating that the total work on the particle causes its change in kinetic energy; and the impulse–momentum theorem, stating that the total impulse on the particle causes its change in momentum. In this problem, you compare predictions of the three theories in one particular case. A 3.00-kg object has velocity $7.00\hat{j}$ m/s. Then, a constant net force $12.0\hat{i}$ N acts on the object for 5.00 s. (a) Calculate the object's final velocity, using the impulse–momentum theorem. (b) Calculate its acceleration from $\vec{a} = (\vec{v}_f - \vec{v}_i)/\Delta t$. (c) Calculate its acceleration from $\vec{a} = \sum \vec{F}/m$. (d) Find the object's vector displacement from $\Delta\vec{r} = \vec{v}_i t + \frac{1}{2}\vec{a}t^2$. (e) Find the work done on the object from $W = \vec{F} \cdot \Delta\vec{r}$. (f) Find the final kinetic energy from $\frac{1}{2}mv_f^2 = \frac{1}{2}m\vec{v}_f \cdot \vec{v}_f$. (g) Find the final kinetic energy from $\frac{1}{2}mv_i^2 + W$. (h) State the result of comparing the answers to parts (b) and (c), and the answers to parts (f) and (g).

- 91.** A 2.00-g particle moving at 8.00 m/s makes a perfectly elastic head-on collision with a resting 1.00-g object. (a) Find the speed of each particle after the collision. (b) Find the speed of each particle after the collision if the stationary particle has a mass of 10.0 g. (c) Find the final kinetic energy of the incident 2.00-g particle in the situations described in parts (a) and (b). In which case does the incident particle lose more kinetic energy?

Challenge Problems

- 92.** In the 1968 Olympic games, University of Oregon jumper Dick Fosbury introduced a new technique of high jumping called the “Fosbury flop.” It contributed to raising the world record by about 30 cm and is currently used by nearly every world-class jumper. In this technique, the jumper goes over the bar face-up while arching her back as much as possible as shown in Figure P9.92a. This action places her center of mass outside her body, below her back. As her body goes over the bar, her center of mass passes below the bar. Because a given energy input implies a certain elevation for her center of mass, the action of arching her back means that her body is higher than if her back were straight. As a model, consider the jumper as a thin uniform rod of length L . When the rod is straight, its center of mass is at its center. Now bend the rod in a circular arc so that it subtends an angle of 90.0° at the center of the arc as shown in Figure P9.92b. In this configuration, how far outside the rod is the center of mass?




Figure P9.92

- 93.** Two particles with masses m and $3m$ are moving toward each other along the x axis with the same initial speeds

v_i . Particle m is traveling to the left, and particle $3m$ is traveling to the right. They undergo an elastic glancing collision such that particle m is moving in the negative y direction after the collision at a right angle from its initial direction. (a) Find the final speeds of the two particles in terms of v_i . (b) What is the angle θ at which the particle $3m$ is scattered?

- 94.** Sand from a stationary hopper falls onto a moving conveyor belt at the rate of 5.00 kg/s as shown in Figure P9.94. The conveyor belt is supported by frictionless rollers and moves at a constant speed of $v = 0.750$ m/s under the action of a constant horizontal external force \vec{F}_{ext} supplied by the motor that drives the belt. Find (a) the sand's rate of change of momentum in the horizontal direction, (b) the force of friction exerted by the belt on the sand, (c) the external force \vec{F}_{ext} , (d) the work done by \vec{F}_{ext} in 1 s, and (e) the kinetic energy acquired by the falling sand each second due to the change in its horizontal motion. (f) Why are the answers to parts (d) and (e) different?

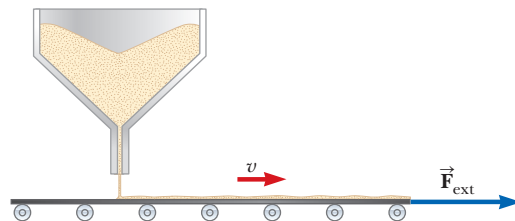


Figure P9.94

- 95.** On a horizontal air track, a glider of mass m carries a T-shaped post. The post supports a small dense sphere, also of mass m , hanging just above the top of the glider on a cord of length L . The glider and sphere are initially at rest with the cord vertical. (Figure P9.57 shows a cart and a sphere similarly connected.) A constant horizontal force of magnitude F is applied to the glider, moving it through displacement x_1 ; then the force is removed. During the time interval when the force is applied, the sphere moves through a displacement with horizontal component x_2 . (a) Find the horizontal component of the velocity of the center of mass of the glider–sphere system when the force is removed. (b) After the force is removed, the glider continues to move on the track and the sphere swings back and forth, both without friction. Find an expression for the largest angle the cord makes with the vertical.

- 96. Review.** A chain of length L and total mass M is released from rest with its lower end just touching the top of a table as shown in Figure P9.96a. Find the force exerted by the table on the chain after the chain has fallen through a distance x as shown in Figure P9.96b. (Assume each link comes to rest the instant it reaches the table.)

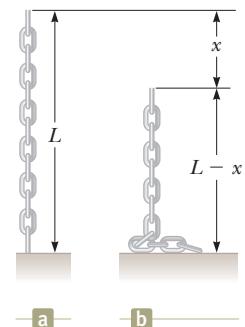


Figure P9.96

Rotation of a Rigid Object About a Fixed Axis



- 10.1 Angular Position, Velocity, and Acceleration
- 10.2 Analysis Model: Rigid Object Under Constant Angular Acceleration
- 10.3 Angular and Translational Quantities
- 10.4 Torque
- 10.5 Analysis Model: Rigid Object Under a Net Torque
- 10.6 Calculation of Moments of Inertia
- 10.7 Rotational Kinetic Energy
- 10.8 Energy Considerations in Rotational Motion
- 10.9 Rolling Motion of a Rigid Object

When an extended object such as a wheel rotates about its axis, the motion cannot be analyzed by modeling the object as a particle because at any given time different parts of the object have different linear velocities and linear accelerations. We can, however, analyze the motion of an extended object by modeling it as a system of many particles, each of which has its own linear velocity and linear acceleration as discussed in Section 9.7.

In dealing with a rotating object, analysis is greatly simplified by assuming the object is rigid. A **rigid object** is one that is nondeformable; that is, the relative locations of all particles of which the object is composed remain constant. All real objects are deformable to some extent; our rigid-object model, however, is useful in many situations in which deformation is negligible. We have developed analysis models based on particles and systems. In this chapter, we introduce another class of analysis models based on the rigid-object model.

10.1 Angular Position, Velocity, and Acceleration

We will develop our understanding of rotational motion in a manner parallel to that used for translational motion in previous chapters. We began in Chapter 2 by

The Malaysian pastime of *gasing* involves the spinning of tops that can have masses up to 5 kg. Professional spinners can spin their tops so that they might rotate for more than an hour before stopping. We will study the rotational motion of objects such as these tops in this chapter. (Courtesy Tourism Malaysia)

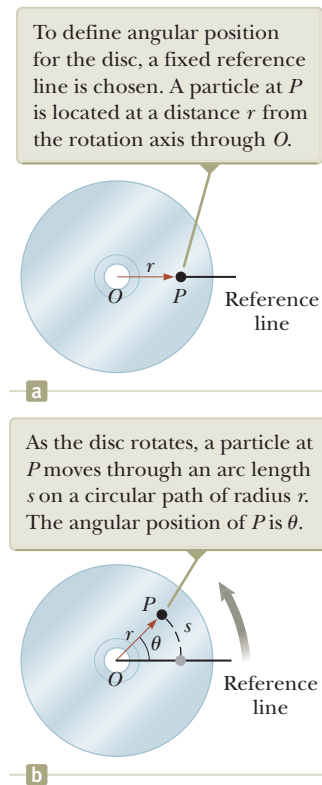


Figure 10.1 A compact disc rotating about a fixed axis through O perpendicular to the plane of the figure.

Pitfall Prevention 10.1

Remember the Radian In rotational equations, you *must* use angles expressed in radians. Don't fall into the trap of using angles measured in degrees in rotational equations.

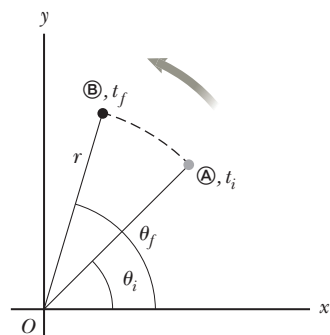


Figure 10.2 A particle on a rotating rigid object moves from \textcircled{A} to \textcircled{B} along the arc of a circle. In the time interval $\Delta t = t_f - t_i$, the radial line of length r moves through an angular displacement $\Delta\theta = \theta_f - \theta_i$.

Average angular speed ►

defining kinematic variables: position, velocity, and acceleration. We do the same here for rotational motion.

Figure 10.1 illustrates an overhead view of a rotating compact disc, or CD. The disc rotates about a fixed axis perpendicular to the plane of the figure and passing through the center of the disc at O . A small element of the disc modeled as a particle at P is at a fixed distance r from the origin and rotates about it in a circle of radius r . (In fact, *every* element of the disc undergoes circular motion about O .) It is convenient to represent the position of P with its polar coordinates (r, θ) , where r is the distance from the origin to P and θ is measured *counterclockwise* from some reference line fixed in space as shown in Figure 10.1a. In this representation, the angle θ changes in time while r remains constant. As the particle moves along the circle from the reference line, which is at angle $\theta = 0$, it moves through an arc of length s as in Figure 10.1b. The arc length s is related to the angle θ through the relationship

$$s = r\theta \quad (10.1a)$$

$$\theta = \frac{s}{r} \quad (10.1b)$$

Because θ is the ratio of an arc length and the radius of the circle, it is a pure number. Usually, however, we give θ the artificial unit **radian** (rad), where one radian is the angle subtended by an arc length equal to the radius of the arc. Because the circumference of a circle is $2\pi r$, it follows from Equation 10.1b that 360° corresponds to an angle of $(2\pi r/r)$ rad = 2π rad. Hence, $1 \text{ rad} = 360^\circ/2\pi \approx 57.3^\circ$. To convert an angle in degrees to an angle in radians, we use that $\pi \text{ rad} = 180^\circ$, so

$$\theta(\text{rad}) = \frac{\pi}{180^\circ} \theta(\text{deg})$$

For example, 60° equals $\pi/3$ rad and 45° equals $\pi/4$ rad.

Because the disc in Figure 10.1 is a rigid object, as the particle moves through an angle θ from the reference line, every other particle on the object rotates through the same angle θ . Therefore, we can associate the angle θ with the entire rigid object as well as with an individual particle, which allows us to define the *angular position* of a rigid object in its rotational motion. We choose a reference line on the object, such as a line connecting O and a chosen particle on the object. The **angular position** of the rigid object is the angle θ between this reference line on the object and the fixed reference line in space, which is often chosen as the x axis. Such identification is similar to the way we define the position of an object in translational motion as the distance x between the object and the reference position, which is the origin, $x = 0$. Therefore, the angle θ plays the same role in rotational motion that the position x does in translational motion.

As the particle in question on our rigid object travels from position \textcircled{A} to position \textcircled{B} in a time interval Δt as in Figure 10.2, the reference line fixed to the object sweeps out an angle $\Delta\theta = \theta_f - \theta_i$. This quantity $\Delta\theta$ is defined as the **angular displacement** of the rigid object:

$$\Delta\theta \equiv \theta_f - \theta_i$$

The rate at which this angular displacement occurs can vary. If the rigid object spins rapidly, this displacement can occur in a short time interval. If it rotates slowly, this displacement occurs in a longer time interval. These different rotation rates can be quantified by defining the **average angular speed** ω_{avg} (Greek letter omega) as the ratio of the angular displacement of a rigid object to the time interval Δt during which the displacement occurs:

$$\omega_{\text{avg}} \equiv \frac{\theta_f - \theta_i}{t_f - t_i} = \frac{\Delta\theta}{\Delta t} \quad (10.2)$$

In analogy to translational speed, the **instantaneous angular speed** ω is defined as the limit of the average angular speed as Δt approaches zero:

$$\omega \equiv \lim_{\Delta t \rightarrow 0} \frac{\Delta\theta}{\Delta t} = \frac{d\theta}{dt} \quad (10.3)$$

◀ Instantaneous angular speed

Angular speed has units of radians per second (rad/s), which can be written as s^{-1} because radians are not dimensional. We take ω to be positive when θ is increasing (counterclockwise motion in Fig. 10.2) and negative when θ is decreasing (clockwise motion in Fig. 10.2).

Quick Quiz 10.1 A rigid object rotates in a counterclockwise sense around a fixed axis. Each of the following pairs of quantities represents an initial angular position and a final angular position of the rigid object. (i) Which of the sets can *only* occur if the rigid object rotates through more than 180° ? (a) 3 rad, 6 rad (b) -1 rad, 1 rad (c) 1 rad, 5 rad (ii) Suppose the change in angular position for each of these pairs of values occurs in 1 s. Which choice represents the lowest average angular speed?

If the instantaneous angular speed of an object changes from ω_i to ω_f in the time interval Δt , the object has an angular acceleration. The **average angular acceleration** α_{avg} (Greek letter alpha) of a rotating rigid object is defined as the ratio of the change in the angular speed to the time interval Δt during which the change in the angular speed occurs:

$$\alpha_{\text{avg}} \equiv \frac{\omega_f - \omega_i}{t_f - t_i} = \frac{\Delta\omega}{\Delta t} \quad (10.4)$$

◀ Average angular acceleration

In analogy to translational acceleration, the **instantaneous angular acceleration** is defined as the limit of the average angular acceleration as Δt approaches zero:

$$\alpha \equiv \lim_{\Delta t \rightarrow 0} \frac{\Delta\omega}{\Delta t} = \frac{d\omega}{dt} \quad (10.5)$$

◀ Instantaneous angular acceleration

Angular acceleration has units of radians per second squared (rad/s^2), or simply s^{-2} . Notice that α is positive when a rigid object rotating counterclockwise is speeding up or when a rigid object rotating clockwise is slowing down during some time interval.

When a rigid object is rotating about a *fixed* axis, every particle on the object rotates through the same angle in a given time interval and has the same angular speed and the same angular acceleration. Therefore, like the angular position θ , the quantities ω and α characterize the rotational motion of the entire rigid object as well as individual particles in the object.

Angular position (θ), angular speed (ω), and angular acceleration (α) are analogous to translational position (x), translational speed (v), and translational acceleration (a). The variables θ , ω , and α differ dimensionally from the variables x , v , and a only by a factor having the unit of length. (See Section 10.3.)

We have not specified any direction for angular speed and angular acceleration. Strictly speaking, ω and α are the magnitudes of the angular velocity and the angular acceleration vectors¹ $\vec{\omega}$ and $\vec{\alpha}$, respectively, and they should always be positive. Because we are considering rotation about a fixed axis, however, we can use non-vector notation and indicate the vectors' directions by assigning a positive or negative sign to ω and α as discussed earlier with regard to Equations 10.3 and 10.5. For rotation about a fixed axis, the only direction that uniquely specifies the rotational motion is the direction along the axis of rotation. Therefore, the directions of $\vec{\omega}$ and $\vec{\alpha}$ are along this axis. If a particle rotates in the xy plane as in Figure 10.2, the

Pitfall Prevention 10.2

Specify Your Axis In solving rotation problems, you must specify an axis of rotation. This new feature does not exist in our study of translational motion. The choice is arbitrary, but once you make it, you must maintain that choice consistently throughout the problem. In some problems, the physical situation suggests a natural axis, such as one along the axle of an automobile wheel. In other problems, there may not be an obvious choice, and you must exercise judgment.

¹Although we do not verify it here, the instantaneous angular velocity and instantaneous angular acceleration are vector quantities, but the corresponding average values are not because angular displacements do not add as vector quantities for finite rotations.

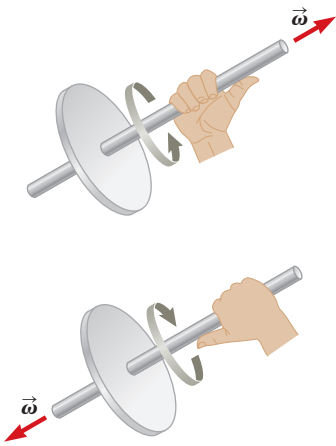


Figure 10.3 The right-hand rule for determining the direction of the angular velocity vector.

Rotational kinematic equations ▶

Pitfall Prevention 10.3

Just Like Translation? Equations 10.6 to 10.9 and Table 10.1 might suggest that rotational kinematics is just like translational kinematics. That is almost true, with two key differences. (1) In rotational kinematics, you must specify a rotation axis (per Pitfall Prevention 10.2). (2) In rotational motion, the object keeps returning to its original orientation; therefore, you may be asked for the number of revolutions made by a rigid object. This concept has no analog in translational motion.

direction of $\vec{\omega}$ for the particle is out of the plane of the diagram when the rotation is counterclockwise and into the plane of the diagram when the rotation is clockwise. To illustrate this convention, it is convenient to use the *right-hand rule* demonstrated in Figure 10.3. When the four fingers of the right hand are wrapped in the direction of rotation, the extended right thumb points in the direction of $\vec{\omega}$. The direction of $\vec{\alpha}$ follows from its definition $\vec{\alpha} \equiv d\vec{\omega}/dt$. It is in the same direction as $\vec{\omega}$ if the angular speed is increasing in time, and it is antiparallel to $\vec{\omega}$ if the angular speed is decreasing in time.

10.2 Analysis Model: Rigid Object Under Constant Angular Acceleration

In our study of translational motion, after introducing the kinematic variables, we considered the special case of a particle under constant acceleration. We follow the same procedure here for a rigid object under constant angular acceleration.

Imagine a rigid object such as the CD in Figure 10.1 rotates about a fixed axis and has a constant angular acceleration. In parallel with our analysis model of the particle under constant acceleration, we generate a new analysis model for rotational motion called the **rigid object under constant angular acceleration**. We develop kinematic relationships for this model in this section. Writing Equation 10.5 in the form $d\omega = \alpha dt$ and integrating from $t_i = 0$ to $t_f = t$ gives

$$\omega_f = \omega_i + \alpha t \quad (\text{for constant } \alpha) \quad (10.6)$$

where ω_i is the angular speed of the rigid object at time $t = 0$. Equation 10.6 allows us to find the angular speed ω_f of the object at any later time t . Substituting Equation 10.6 into Equation 10.3 and integrating once more, we obtain

$$\theta_f = \theta_i + \omega_i t + \frac{1}{2}\alpha t^2 \quad (\text{for constant } \alpha) \quad (10.7)$$

where θ_i is the angular position of the rigid object at time $t = 0$. Equation 10.7 allows us to find the angular position θ_f of the object at any later time t . Eliminating t from Equations 10.6 and 10.7 gives

$$\omega_f^2 = \omega_i^2 + 2\alpha(\theta_f - \theta_i) \quad (\text{for constant } \alpha) \quad (10.8)$$

This equation allows us to find the angular speed ω_f of the rigid object for any value of its angular position θ_f . If we eliminate α between Equations 10.6 and 10.7, we obtain

$$\theta_f = \theta_i + \frac{1}{2}(\omega_i + \omega_f)t \quad (\text{for constant } \alpha) \quad (10.9)$$

Notice that these kinematic expressions for the rigid object under constant angular acceleration are of the same mathematical form as those for a particle under constant acceleration (Chapter 2). They can be generated from the equations for translational motion by making the substitutions $x \rightarrow \theta$, $v \rightarrow \omega$, and $a \rightarrow \alpha$. Table 10.1 compares the kinematic equations for the rigid object under constant angular acceleration and particle under constant acceleration models.

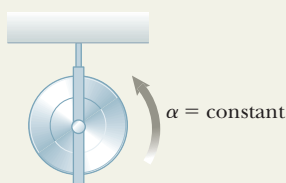
- Quick Quiz 10.2** Consider again the pairs of angular positions for the rigid object in Quick Quiz 10.1. If the object starts from rest at the initial angular position, moves counterclockwise with constant angular acceleration, and arrives at the final angular position with the same angular speed in all three cases, for which choice is the angular acceleration the highest?

Table 10.1 Kinematic Equations for Rotational and Translational Motion

Rigid Object Under Constant Angular Acceleration	Particle Under Constant Acceleration
$\omega_f = \omega_i + \alpha t$ (10.6)	$v_f = v_i + at$ (2.13)
$\theta_f = \theta_i + \omega_i t + \frac{1}{2}\alpha t^2$ (10.7)	$x_f = x_i + v_i t + \frac{1}{2}at^2$ (2.16)
$\omega_f^2 = \omega_i^2 + 2\alpha(\theta_f - \theta_i)$ (10.8)	$v_f^2 = v_i^2 + 2a(x_f - x_i)$ (2.17)
$\theta_f = \theta_i + \frac{1}{2}(\omega_i + \omega_f)t$ (10.9)	$x_f = x_i + \frac{1}{2}(v_i + v_f)t$ (2.15)

Analysis Model Rigid Object Under Constant Angular Acceleration

Imagine an object that undergoes a spinning motion such that its angular acceleration is constant. The equations describing its angular position and angular speed are analogous to those for the particle under constant acceleration model:



$$\omega_f = \omega_i + \alpha t \quad (10.6)$$

$$\theta_f = \theta_i + \omega_i t + \frac{1}{2}\alpha t^2 \quad (10.7)$$

$$\omega_f^2 = \omega_i^2 + 2\alpha(\theta_f - \theta_i) \quad (10.8)$$

$$\theta_f = \theta_i + \frac{1}{2}(\omega_i + \omega_f)t \quad (10.9)$$

Examples:

- during its spin cycle, the tub of a clothes washer begins from rest and accelerates up to its final spin speed
- a workshop grinding wheel is turned off and comes to rest under the action of a constant friction force in the bearings of the wheel
- a gyroscope is powered up and approaches its operating speed (Chapter 11)
- the crankshaft of a diesel engine changes to a higher angular speed (Chapter 22)

Example 10.1 Rotating Wheel **AM**

A wheel rotates with a constant angular acceleration of 3.50 rad/s^2 .

(A) If the angular speed of the wheel is 2.00 rad/s at $t_i = 0$, through what angular displacement does the wheel rotate in 2.00 s ?

SOLUTION

Conceptualize Look again at Figure 10.1. Imagine that the compact disc rotates with its angular speed increasing at a constant rate. You start your stopwatch when the disc is rotating at 2.00 rad/s . This mental image is a model for the motion of the wheel in this example.

Categorize The phrase “with a constant angular acceleration” tells us to apply the *rigid object under constant angular acceleration* model to the wheel.

Analyze From the rigid object under constant angular acceleration model, choose Equation 10.7 and rearrange it so that it expresses the angular displacement of the wheel:

$$\Delta\theta = \theta_f - \theta_i = \omega_i t + \frac{1}{2}\alpha t^2$$

Substitute the known values to find the angular displacement at $t = 2.00 \text{ s}$:

$$\begin{aligned} \Delta\theta &= (2.00 \text{ rad/s})(2.00 \text{ s}) + \frac{1}{2}(3.50 \text{ rad/s}^2)(2.00 \text{ s})^2 \\ &= 11.0 \text{ rad} = (11.0 \text{ rad})(180^\circ/\pi \text{ rad}) = 630^\circ \end{aligned}$$

(B) Through how many revolutions has the wheel turned during this time interval?

SOLUTION

Multiply the angular displacement found in part (A) by a conversion factor to find the number of revolutions:

$$\Delta\theta = 630^\circ \left(\frac{1 \text{ rev}}{360^\circ} \right) = 1.75 \text{ rev}$$

(C) What is the angular speed of the wheel at $t = 2.00 \text{ s}$?

SOLUTION

Use Equation 10.6 from the rigid object under constant angular acceleration model to find the angular speed at $t = 2.00 \text{ s}$:

$$\begin{aligned} \omega_f &= \omega_i + \alpha t = 2.00 \text{ rad/s} + (3.50 \text{ rad/s}^2)(2.00 \text{ s}) \\ &= 9.00 \text{ rad/s} \end{aligned}$$

Finalize We could also obtain this result using Equation 10.8 and the results of part (A). (Try it!)

WHAT IF? Suppose a particle moves along a straight line with a constant acceleration of 3.50 m/s^2 . If the velocity of the particle is 2.00 m/s at $t_i = 0$, through what displacement does the particle move in 2.00 s ? What is the velocity of the particle at $t = 2.00 \text{ s}$?

continued

10.1 continued

Answer Notice that these questions are translational analogs to parts (A) and (C) of the original problem. The mathematical solution follows exactly the same form. For the displacement, from the particle under constant acceleration model,

$$\begin{aligned}\Delta x &= x_f - x_i = v_i t + \frac{1}{2} a t^2 \\ &= (2.00 \text{ m/s})(2.00 \text{ s}) + \frac{1}{2}(3.50 \text{ m/s}^2)(2.00 \text{ s})^2 = 11.0 \text{ m}\end{aligned}$$

and for the velocity,

$$v_f = v_i + a t = 2.00 \text{ m/s} + (3.50 \text{ m/s}^2)(2.00 \text{ s}) = 9.00 \text{ m/s}$$

There is no translational analog to part (B) because translational motion under constant acceleration is not repetitive.

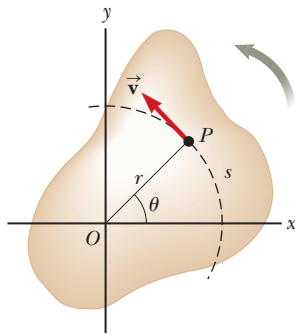


Figure 10.4 As a rigid object rotates about the fixed axis (the z axis) through O , the point P has a tangential velocity \vec{v} that is always tangent to the circular path of radius r .

Relation between tangential velocity and angular velocity

10.3 Angular and Translational Quantities

In this section, we derive some useful relationships between the angular speed and acceleration of a rotating rigid object and the translational speed and acceleration of a point in the object. To do so, we must keep in mind that when a rigid object rotates about a fixed axis as in Figure 10.4, every particle of the object moves in a circle whose center is on the axis of rotation.

Because point P in Figure 10.4 moves in a circle, the translational velocity vector \vec{v} is always tangent to the circular path and hence is called *tangential velocity*. The magnitude of the tangential velocity of the point P is by definition the tangential speed $v = ds/dt$, where s is the distance traveled by this point measured along the circular path. Recalling that $s = r\theta$ (Eq. 10.1a) and noting that r is constant, we obtain

$$v = \frac{ds}{dt} = r \frac{d\theta}{dt}$$

Because $d\theta/dt = \omega$ (see Eq. 10.3), it follows that

$$v = r\omega \quad (10.10)$$

As we saw in Equation 4.17, the tangential speed of a point on a rotating rigid object equals the perpendicular distance of that point from the axis of rotation multiplied by the angular speed. Therefore, although every point on the rigid object has the same *angular* speed, not every point has the same *tangential* speed because r is not the same for all points on the object. Equation 10.10 shows that the tangential speed of a point on the rotating object increases as one moves outward from the center of rotation, as we would intuitively expect. For example, the outer end of a swinging golf club moves much faster than a point near the handle.

We can relate the angular acceleration of the rotating rigid object to the tangential acceleration of the point P by taking the time derivative of v :

$$a_t = \frac{dv}{dt} = r \frac{d\omega}{dt}$$

$$a_t = r\alpha \quad (10.11)$$

That is, the tangential component of the translational acceleration of a point on a rotating rigid object equals the point's perpendicular distance from the axis of rotation multiplied by the angular acceleration.

In Section 4.4, we found that a point moving in a circular path undergoes a radial acceleration a_r directed toward the center of rotation and whose magnitude is that of the centripetal acceleration v^2/r (Fig. 10.5). Because $v = r\omega$ for a point

Relation between tangential acceleration and angular acceleration

P on a rotating object, we can express the centripetal acceleration at that point in terms of angular speed as we did in Equation 4.18:

$$a_c = \frac{v^2}{r} = r\omega^2 \quad (10.12)$$

The total acceleration vector at the point is $\vec{a} = \vec{a}_t + \vec{a}_r$, where the magnitude of \vec{a}_r is the centripetal acceleration a_c . Because \vec{a} is a vector having a radial and a tangential component, the magnitude of \vec{a} at the point P on the rotating rigid object is

$$a = \sqrt{a_t^2 + a_r^2} = \sqrt{r^2 \alpha^2 + r^2 \omega^4} = r\sqrt{\alpha^2 + \omega^4} \quad (10.13)$$

- Quick Quiz 10.3** Ethan and Joseph are riding on a merry-go-round. Ethan rides on a horse at the outer rim of the circular platform, twice as far from the center of the circular platform as Joseph, who rides on an inner horse. (i) When the merry-go-round is rotating at a constant angular speed, what is Ethan's angular speed? (a) twice Joseph's (b) the same as Joseph's (c) half of Joseph's (d) impossible to determine (ii) When the merry-go-round is rotating at a constant angular speed, describe Ethan's tangential speed from the same list of choices.

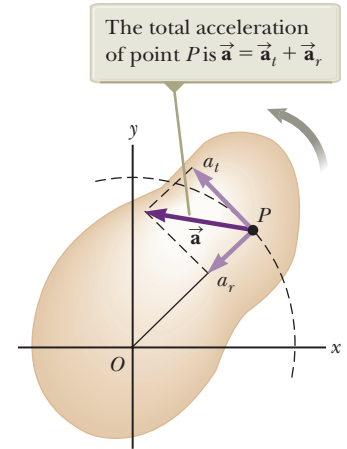


Figure 10.5 As a rigid object rotates about a fixed axis (the z axis) through O , the point P experiences a tangential component of translational acceleration a_t and a radial component of translational acceleration a_r .

Example 10.2

CD Player



On a compact disc (Fig. 10.6), audio information is stored digitally in a series of pits and flat areas on the surface of the disc. The alternations between pits and flat areas on the surface represent binary ones and zeros to be read by the CD player and converted back to sound waves. The pits and flat areas are detected by a system consisting of a laser and lenses. The length of a string of ones and zeros representing one piece of information is the same everywhere on the disc, whether the information is near the center of the disc or near its outer edge. So that this length of ones and zeros always passes by the laser–lens system in the same time interval, the tangential speed of the disc surface at the location of the lens must be constant. According to Equation 10.10, the angular speed must therefore vary as the laser–lens system moves radially along the disc. In a typical CD player, the constant speed of the surface at the point of the laser–lens system is 1.3 m/s.

(A) Find the angular speed of the disc in revolutions per minute when information is being read from the innermost first track ($r = 23$ mm) and the outermost final track ($r = 58$ mm).

SOLUTION

Conceptualize Figure 10.6 shows a photograph of a compact disc. Trace your finger around the circle marked “23 mm” and mentally estimate the time interval to go around the circle once. Now trace your finger around the circle marked “58 mm,” moving your finger across the surface of the page at the same speed as you did when tracing the smaller circle. Notice how much longer in time it takes your finger to go around the larger circle. If your finger represents the laser reading the disc, you can see that the disc rotates once in a longer time interval when the laser reads the information in the outer circle. Therefore, the disc must rotate more slowly when the laser is reading information from this part of the disc.

Categorize This part of the example is categorized as a simple substitution problem. In later parts, we will need to identify analysis models.

Use Equation 10.10 to find the angular speed that gives the required tangential speed at the position of the inner track:

$$\begin{aligned} \omega_i &= \frac{v}{r_i} = \frac{1.3 \text{ m/s}}{2.3 \times 10^{-2} \text{ m}} = 57 \text{ rad/s} \\ &= (57 \text{ rad/s}) \left(\frac{1 \text{ rev}}{2\pi \text{ rad}} \right) \left(\frac{60 \text{ s}}{1 \text{ min}} \right) = 5.4 \times 10^2 \text{ rev/min} \end{aligned}$$

continued




Figure 10.6 (Example 10.2) A compact disc.

10.2 continued

Do the same for the outer track:

$$\omega_f = \frac{v}{r_f} = \frac{1.3 \text{ m/s}}{5.8 \times 10^{-2} \text{ m}} = 22 \text{ rad/s} = 2.1 \times 10^2 \text{ rev/min}$$

The CD player adjusts the angular speed ω of the disc within this range so that information moves past the objective lens at a constant rate.

(B) The maximum playing time of a standard music disc is 74 min and 33 s. How many revolutions does the disc make during that time?

SOLUTION

Categorize From part (A), the angular speed decreases as the disc plays. Let us assume it decreases steadily, with α constant. We can then apply the *rigid object under constant angular acceleration* model to the disc.

Analyze If $t = 0$ is the instant the disc begins rotating, with angular speed of 57 rad/s, the final value of the time t is (74 min)(60 s/min) + 33 s = 4 473 s. We are looking for the angular displacement $\Delta\theta$ during this time interval.

Use Equation 10.9 to find the angular displacement of the disc at $t = 4\,473$ s:

$$\Delta\theta = \theta_f - \theta_i = \frac{1}{2}(\omega_i + \omega_f)t$$

$$= \frac{1}{2}(57 \text{ rad/s} + 22 \text{ rad/s})(4\,473 \text{ s}) = 1.8 \times 10^5 \text{ rad}$$

Convert this angular displacement to revolutions:

$$\Delta\theta = (1.8 \times 10^5 \text{ rad})\left(\frac{1 \text{ rev}}{2\pi \text{ rad}}\right) = 2.8 \times 10^4 \text{ rev}$$

(C) What is the angular acceleration of the compact disc over the 4 473-s time interval?

SOLUTION

Categorize We again model the disc as a *rigid object under constant angular acceleration*. In this case, Equation 10.6 gives the value of the constant angular acceleration. Another approach is to use Equation 10.4 to find the average angular acceleration. In this case, we are not assuming the angular acceleration is constant. The answer is the same from both equations; only the interpretation of the result is different.

Analyze Use Equation 10.6 to find the angular acceleration:

$$\alpha = \frac{\omega_f - \omega_i}{t} = \frac{22 \text{ rad/s} - 57 \text{ rad/s}}{4\,473 \text{ s}} = -7.6 \times 10^{-3} \text{ rad/s}^2$$

Finalize The disc experiences a very gradual decrease in its rotation rate, as expected from the long time interval required for the angular speed to change from the initial value to the final value. In reality, the angular acceleration of the disc is not constant. Problem 90 allows you to explore the actual time behavior of the angular acceleration.

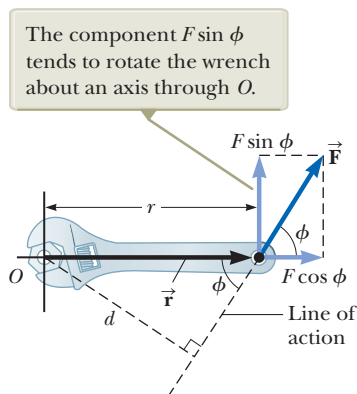


Figure 10.7 The force \vec{F} has a greater rotating tendency about an axis through O as F increases and as the moment arm d increases.

10.4 Torque

In our study of translational motion, after investigating the description of motion, we studied the cause of changes in motion: force. We follow the same plan here: What is the cause of changes in rotational motion?

Imagine trying to rotate a door by applying a force of magnitude F perpendicular to the door surface near the hinges and then at various distances from the hinges. You will achieve a more rapid rate of rotation for the door by applying the force near the doorknob than by applying it near the hinges.

When a force is exerted on a rigid object pivoted about an axis, the object tends to rotate about that axis. The tendency of a force to rotate an object about some axis is measured by a quantity called **torque** $\vec{\tau}$ (Greek letter tau). Torque is a vector, but we will consider only its magnitude here; we will explore its vector nature in Chapter 11.

Consider the wrench in Figure 10.7 that we wish to rotate around an axis that is perpendicular to the page and passes through the center of the bolt. The applied

force \vec{F} acts at an angle ϕ to the horizontal. We define the magnitude of the torque associated with the force \vec{F} around the axis passing through O by the expression

$$\tau \equiv rF \sin \phi = Fd \quad (10.14)$$

where r is the distance between the rotation axis and the point of application of \vec{F} , and d is the perpendicular distance from the rotation axis to the line of action of \vec{F} . (The *line of action* of a force is an imaginary line extending out both ends of the vector representing the force. The dashed line extending from the tail of \vec{F} in Fig. 10.7 is part of the line of action of \vec{F} .) From the right triangle in Figure 10.7 that has the wrench as its hypotenuse, we see that $d = r \sin \phi$. The quantity d is called the **moment arm** (or *lever arm*) of \vec{F} .

In Figure 10.7, the only component of \vec{F} that tends to cause rotation of the wrench around an axis through O is $F \sin \phi$, the component perpendicular to a line drawn from the rotation axis to the point of application of the force. The horizontal component $F \cos \phi$, because its line of action passes through O , has no tendency to produce rotation about an axis passing through O . From the definition of torque, the rotating tendency increases as F increases and as d increases, which explains why it is easier to rotate a door if we push at the doorknob rather than at a point close to the hinges. We also want to apply our push as closely perpendicular to the door as we can so that ϕ is close to 90° . Pushing sideways on the doorknob ($\phi = 0$) will not cause the door to rotate.

If two or more forces act on a rigid object as in Figure 10.8, each tends to produce rotation about the axis through O . In this example, \vec{F}_2 tends to rotate the object clockwise and \vec{F}_1 tends to rotate it counterclockwise. We use the convention that the sign of the torque resulting from a force is positive if the turning tendency of the force is counterclockwise and negative if the turning tendency is clockwise. For Example, in Figure 10.8, the torque resulting from \vec{F}_1 , which has a moment arm d_1 , is positive and equal to $+F_1 d_1$; the torque from \vec{F}_2 is negative and equal to $-F_2 d_2$. Hence, the *net* torque about an axis through O is

$$\sum \tau = \tau_1 + \tau_2 = F_1 d_1 - F_2 d_2$$

Torque should not be confused with force. Forces can cause a change in translational motion as described by Newton's second law. Forces can also cause a change in rotational motion, but the effectiveness of the forces in causing this change depends on both the magnitudes of the forces and the moment arms of the forces, in the combination we call *torque*. Torque has units of force times length—newton meters ($\text{N} \cdot \text{m}$) in SI units—and should be reported in these units. Do not confuse torque and work, which have the same units but are very different concepts.

- Quick Quiz 10.4** (i) If you are trying to loosen a stubborn screw from a piece of wood with a screwdriver and fail, should you find a screwdriver for which the handle is (a) longer or (b) fatter? (ii) If you are trying to loosen a stubborn bolt from a piece of metal with a wrench and fail, should you find a wrench for which the handle is (a) longer or (b) fatter?

Example 10.3 The Net Torque on a Cylinder

A one-piece cylinder is shaped as shown in Figure 10.9, with a core section protruding from the larger drum. The cylinder is free to rotate about the central z axis shown in the drawing. A rope wrapped around the drum, which has radius R_1 , exerts a force \vec{T}_1 to the right on the cylinder. A rope wrapped around the core, which has radius R_2 , exerts a force \vec{T}_2 downward on the cylinder.

(A) What is the net torque acting on the cylinder about the rotation axis (which is the z axis in Fig. 10.9)?

continued

Pitfall Prevention 10.4

Torque Depends on Your Choice of Axis There is no unique value of the torque on an object. Its value depends on your choice of rotation axis.

◀ Moment arm

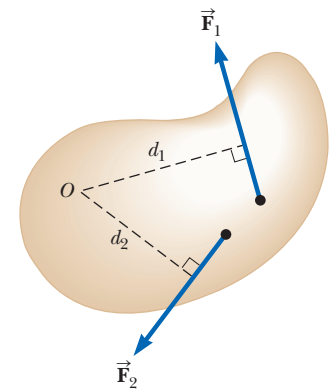


Figure 10.8 The force \vec{F}_1 tends to rotate the object counterclockwise about an axis through O , and \vec{F}_2 tends to rotate it clockwise.

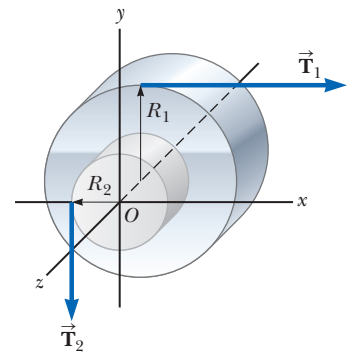


Figure 10.9 (Example 10.3) A solid cylinder pivoted about the z axis through O . The moment arm of \vec{T}_1 is R_1 , and the moment arm of \vec{T}_2 is R_2 .

10.3 continued

SOLUTION

Conceptualize Imagine that the cylinder in Figure 10.9 is a shaft in a machine. The force \vec{T}_1 could be applied by a drive belt wrapped around the drum. The force \vec{T}_2 could be applied by a friction brake at the surface of the core.

Categorize This example is a substitution problem in which we evaluate the net torque using Equation 10.14.

The torque due to \vec{T}_1 about the rotation axis is $-R_1T_1$. (The sign is negative because the torque tends to produce clockwise rotation.) The torque due to \vec{T}_2 is $+R_2T_2$. (The sign is positive because the torque tends to produce counterclockwise rotation of the cylinder.)

Evaluate the net torque about the rotation axis:

$$\sum \tau = \tau_1 + \tau_2 = R_2T_2 - R_1T_1$$

As a quick check, notice that if the two forces are of equal magnitude, the net torque is negative because $R_1 > R_2$. Starting from rest with both forces of equal magnitude acting on it, the cylinder would rotate clockwise because \vec{T}_1 would be more effective at turning it than would \vec{T}_2 .

(B) Suppose $T_1 = 5.0$ N, $R_1 = 1.0$ m, $T_2 = 15$ N, and $R_2 = 0.50$ m. What is the net torque about the rotation axis, and which way does the cylinder rotate starting from rest?

SOLUTION

Substitute the given values:

$$\sum \tau = (0.50 \text{ m})(15 \text{ N}) - (1.0 \text{ m})(5.0 \text{ N}) = 2.5 \text{ N} \cdot \text{m}$$

Because this net torque is positive, the cylinder begins to rotate in the counterclockwise direction.

The tangential force on the particle results in a torque on the particle about an axis through the center of the circle.

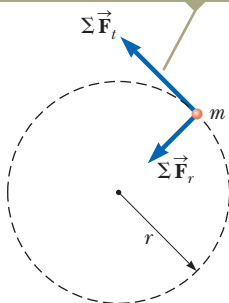


Figure 10.10 A particle rotating in a circle under the influence of a tangential net force $\Sigma \vec{F}_t$. A radial net force $\Sigma \vec{F}_r$ also must be present to maintain the circular motion.

10.5 Analysis Model: Rigid Object Under a Net Torque

In Chapter 5, we learned that a net force on an object causes an acceleration of the object and that the acceleration is proportional to the net force. These facts are the basis of the particle under a net force model whose mathematical representation is Newton's second law. In this section, we show the rotational analog of Newton's second law: the angular acceleration of a rigid object rotating about a fixed axis is proportional to the net torque acting about that axis. Before discussing the more complex case of rigid-object rotation, however, it is instructive first to discuss the case of a particle moving in a circular path about some fixed point under the influence of an external force.

Consider a particle of mass m rotating in a circle of radius r under the influence of a tangential net force $\Sigma \vec{F}_t$ and a radial net force $\Sigma \vec{F}_r$, as shown in Figure 10.10. The radial net force causes the particle to move in the circular path with a centripetal acceleration. The tangential force provides a tangential acceleration \vec{a}_t , and

$$\Sigma F_t = ma_t$$

The magnitude of the net torque due to $\Sigma \vec{F}_t$ on the particle about an axis perpendicular to the page through the center of the circle is

$$\Sigma \tau = \Sigma F_t r = (ma_t)r$$

Because the tangential acceleration is related to the angular acceleration through the relationship $a_t = r\alpha$ (Eq. 10.11), the net torque can be expressed as

$$\Sigma \tau = (mr\alpha)r = (mr^2)\alpha \quad (10.15)$$

Let us denote the quantity mr^2 with the symbol I for now. We will say more about this quantity below. Using this notation, Equation 10.15 can be written as

$$\Sigma \tau = I\alpha \quad (10.16)$$

That is, the net torque acting on the particle is proportional to its angular acceleration. Notice that $\Sigma \tau = I\alpha$ has the same mathematical form as Newton's second law of motion, $\Sigma F = ma$.

Now let us extend this discussion to a rigid object of arbitrary shape rotating about a fixed axis passing through a point O as in Figure 10.11. The object can be regarded as a collection of particles of mass m_i . If we impose a Cartesian coordinate system on the object, each particle rotates in a circle about the origin and each has a tangential acceleration a_i produced by an external tangential force of magnitude F_i . For any given particle, we know from Newton's second law that

$$F_i = m_i a_i$$

The external torque $\vec{\tau}_i$ associated with the force \vec{F}_i acts about the origin and its magnitude is given by

$$\tau_i = r_i F_i = r_i m_i a_i$$

Because $a_i = r_i \alpha$, the expression for τ_i becomes

$$\tau_i = m_i r_i^2 \alpha$$

Although each particle in the rigid object may have a different translational acceleration a_i , they all have the *same* angular acceleration α . With that in mind, we can add the torques on all of the particles making up the rigid object to obtain the net torque on the object about an axis through O due to all external forces:

$$\sum \tau_{\text{ext}} = \sum \tau_i = \sum m_i r_i^2 \alpha = \left(\sum m_i r_i^2 \right) \alpha \quad (10.17)$$

where α can be taken outside the summation because it is common to all particles. Calling the quantity in parentheses I , the expression for $\sum \tau_{\text{ext}}$ becomes

$$\sum \tau_{\text{ext}} = I \alpha \quad (10.18)$$

This equation for a rigid object is the same as that found for a particle moving in a circular path (Eq. 10.16). The net torque about the rotation axis is proportional to the angular acceleration of the object, with the proportionality factor being I , a quantity that we have yet to describe fully. Equation 10.18 is the mathematical representation of the analysis model of a **rigid object under a net torque**, the rotational analog to the particle under a net force.

Let us now address the quantity I , defined as follows:

$$I = \sum m_i r_i^2 \quad (10.19)$$

This quantity is called the **moment of inertia** of the object, and depends on the masses of the particles making up the object and their distances from the rotation axis. Notice that Equation 10.19 reduces to $I = mr^2$ for a single particle, consistent with our use of the notation I that we used in going from Equation 10.15 to Equation 10.16. Note that moment of inertia has units of $\text{kg} \cdot \text{m}^2$ in SI units.

Equation 10.18 has the same form as Newton's second law for a system of particles as expressed in Equation 9.39:

$$\sum \vec{F}_{\text{ext}} = M \vec{a}_{\text{CM}}$$

Consequently, the moment of inertia I must play the same role in rotational motion as the role that mass plays in translational motion: the moment of inertia is the resistance to changes in rotational motion. This resistance depends not only on the mass of the object, but also on how the mass is distributed around the rotation axis. Table 10.2 on page 304 gives the moments of inertia² for a number of objects about specific axes. The moments of inertia of rigid objects with simple geometry (high symmetry) are relatively easy to calculate provided the rotation axis coincides with an axis of symmetry, as we show in the next section.

The particle of mass m_i of the rigid object experiences a torque in the same way that the particle in Figure 10.10 does.

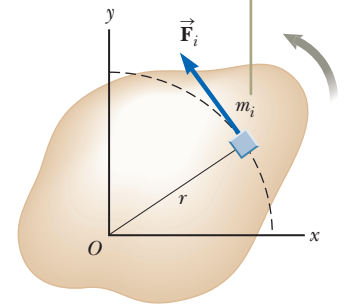


Figure 10.11 A rigid object rotating about an axis through O . Each particle of mass m_i rotates about the axis with the same angular acceleration α .

◀ **Torque on a rigid object is proportional to angular acceleration**

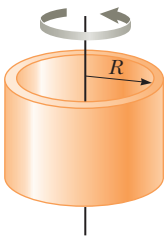
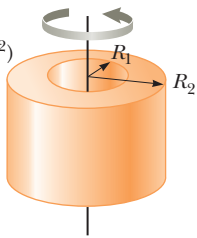
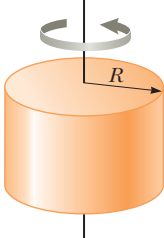
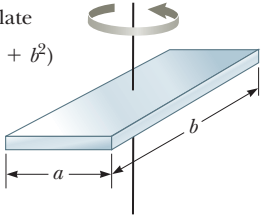
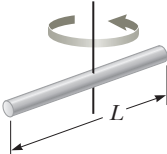
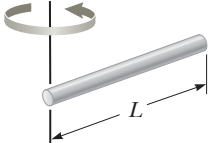
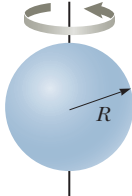
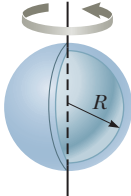
Pitfall Prevention 10.5

No Single Moment of Inertia

There is one major difference between mass and moment of inertia. Mass is an inherent property of an object. The moment of inertia of an object depends on your choice of rotation axis. Therefore, there is no single value of the moment of inertia for an object. There is a *minimum* value of the moment of inertia, which is that calculated about an axis passing through the center of mass of the object.

²Civil engineers use moment of inertia to characterize the elastic properties (rigidity) of such structures as loaded beams. Hence, it is often useful even in a nonrotational context.

Table 10.2 Moments of Inertia of Homogeneous Rigid Objects with Different Geometries

Hoop or thin cylindrical shell $I_{\text{CM}} = MR^2$		Hollow cylinder $I_{\text{CM}} = \frac{1}{2}M(R_1^2 + R_2^2)$	
Solid cylinder or disk $I_{\text{CM}} = \frac{1}{2}MR^2$		Rectangular plate $I_{\text{CM}} = \frac{1}{12}M(a^2 + b^2)$	
Long, thin rod with rotation axis through center $I_{\text{CM}} = \frac{1}{12}ML^2$		Long, thin rod with rotation axis through end $I = \frac{1}{3}ML^2$	
Solid sphere $I_{\text{CM}} = \frac{2}{5}MR^2$		Thin spherical shell $I_{\text{CM}} = \frac{2}{3}MR^2$	

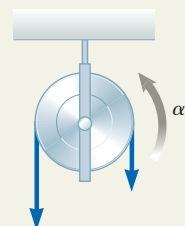
- Quick Quiz 10.5** You turn off your electric drill and find that the time interval for the rotating bit to come to rest due to frictional torque in the drill is Δt . You replace the bit with a larger one that results in a doubling of the moment of inertia of the drill's entire rotating mechanism. When this larger bit is rotated at the same angular speed as the first and the drill is turned off, the frictional torque remains the same as that for the previous situation. What is the time interval for this second bit to come to rest? (a) $4\Delta t$ (b) $2\Delta t$ (c) Δt (d) $0.5\Delta t$ (e) $0.25\Delta t$ (f) impossible to determine

Analysis Model Rigid Object Under a Net Torque

Imagine you are analyzing the motion of an object that is free to rotate about a fixed axis. The cause of changes in rotational motion of this object is torque applied to the object and, in parallel to Newton's second law for translation motion, the torque is equal to the product of the moment of inertia of the object and the angular acceleration:

$$\sum \tau_{\text{ext}} = I\alpha \quad (10.18)$$

The torque, the moment of inertia, and the angular acceleration must all be evaluated around the same rotation axis.



Analysis Model Rigid Object Under a Net Torque (*continued*)
Examples:

- a bicycle chain around the sprocket of a bicycle causes the rear wheel of the bicycle to rotate
- an electric dipole moment in an electric field rotates due to the electric force from the field (Chapter 23)
- a magnetic dipole moment in a magnetic field rotates due to the magnetic force from the field (Chapter 30)
- the armature of a motor rotates due to the torque exerted by a surrounding magnetic field (Chapter 31)

Example 10.4 Rotating Rod **AM**

A uniform rod of length L and mass M is attached at one end to a frictionless pivot and is free to rotate about the pivot in the vertical plane as in Figure 10.12. The rod is released from rest in the horizontal position. What are the initial angular acceleration of the rod and the initial translational acceleration of its right end?

SOLUTION

Conceptualize Imagine what happens to the rod in Figure 10.12 when it is released. It rotates clockwise around the pivot at the left end.

Categorize The rod is categorized as a *rigid object under a net torque*. The torque is due only to the gravitational force on the rod if the rotation axis is chosen to pass through the pivot in Figure 10.12. We *cannot* categorize the rod as a rigid object under constant angular acceleration because the torque exerted on the rod and therefore the angular acceleration of the rod vary with its angular position.

Analyze The only force contributing to the torque about an axis through the pivot is the gravitational force $M\vec{g}$ exerted on the rod. (The force exerted by the pivot on the rod has zero torque about the pivot because its moment arm is zero.) To compute the torque on the rod, we assume the gravitational force acts at the center of mass of the rod as shown in Figure 10.12.

Write an expression for the magnitude of the net external torque due to the gravitational force about an axis through the pivot:

$$\sum \tau_{\text{ext}} = Mg\left(\frac{L}{2}\right)$$

Use Equation 10.18 to obtain the angular acceleration of the rod, using the moment of inertia for the rod from Table 10.2:

$$(1) \quad \alpha = \frac{\sum \tau_{\text{ext}}}{I} = \frac{Mg(L/2)}{\frac{1}{3}ML^2} = \frac{3g}{2L}$$

Use Equation 10.11 with $r = L$ to find the initial translational acceleration of the right end of the rod:

$$a_t = L\alpha = \frac{3}{2}g$$

Finalize These values are the *initial* values of the angular and translational accelerations. Once the rod begins to rotate, the gravitational force is no longer perpendicular to the rod and the values of the two accelerations decrease, going to zero at the moment the rod passes through the vertical orientation.

WHAT IF? What if we were to place a penny on the end of the rod and then release the rod? Would the penny stay in contact with the rod?

Answer The result for the initial acceleration of a point on the end of the rod shows that $a_t > g$. An unsupported penny falls at acceleration g . So, if we place a penny on the end of the rod and then release the rod, the end of the rod falls faster than the penny does! The penny does not stay in contact with the rod. (Try this with a penny and a meterstick!)

The question now is to find the location on the rod at which we can place a penny that *will* stay in contact as both begin to fall. To find the translational acceleration of an arbitrary point on the rod at a distance $r < L$

from the pivot point, we combine Equation (1) with Equation 10.11:

$$a_t = r\alpha = \frac{3g}{2L}r$$

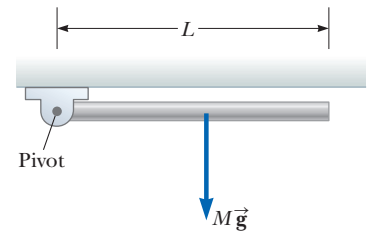


Figure 10.12 (Example 10.4) A rod is free to rotate around a pivot at the left end. The gravitational force on the rod acts at its center of mass.

continued

10.4 continued

For the penny to stay in contact with the rod, the limiting case is that the translational acceleration must be equal to that due to gravity:

$$a_t = g = \frac{3g}{2L} r$$

$$r = \frac{2}{3}L$$

Therefore, a penny placed closer to the pivot than two-thirds of the length of the rod stays in contact with the falling rod, but a penny farther out than this point loses contact.

Conceptual Example 10.5 Falling Smokestacks and Tumbling Blocks

When a tall smokestack falls over, it often breaks somewhere along its length before it hits the ground as shown in Figure 10.13. Why?

SOLUTION

As the smokestack rotates around its base, each higher portion of the smokestack falls with a larger tangential acceleration than the portion below it according to Equation 10.11. The angular acceleration increases as the smokestack tips farther. Eventually, higher portions of the smokestack experience an acceleration greater than the acceleration that could result from gravity alone; this situation is similar to that described in Example 10.4. That can happen only if these portions are being pulled downward by a force in addition to the gravitational force. The force that causes that to occur is the shear force from lower portions of the smokestack. Eventually, the shear force that provides this acceleration is greater than the smokestack can withstand, and the smokestack breaks. The same thing happens with a tall tower of children's toy blocks. Borrow some blocks from a child and build such a tower. Push it over and watch it come apart at some point before it strikes the floor.



Figure 10.13 (Conceptual Example 10.5) A falling smokestack breaks at some point along its length.

Example 10.6 Angular Acceleration of a Wheel **AM**

A wheel of radius R , mass M , and moment of inertia I is mounted on a frictionless, horizontal axle as in Figure 10.14. A light cord wrapped around the wheel supports an object of mass m . When the wheel is released, the object accelerates downward, the cord unwraps off the wheel, and the wheel rotates with an angular acceleration. Find expressions for the angular acceleration of the wheel, the translational acceleration of the object, and the tension in the cord.

SOLUTION

Conceptualize Imagine that the object is a bucket in an old-fashioned water well. It is tied to a cord that passes around a cylinder equipped with a crank for raising the bucket. After the bucket has been raised, the system is released and the bucket accelerates downward while the cord unwinds off the cylinder.

Categorize We apply two analysis models here. The object is modeled as a *particle under a net force*. The wheel is modeled as a *rigid object under a net torque*.

Analyze The magnitude of the torque acting on the wheel about its axis of rotation is $\tau = TR$, where T is the force exerted by the cord on the rim of the wheel. (The gravitational force exerted by the Earth on the wheel and the

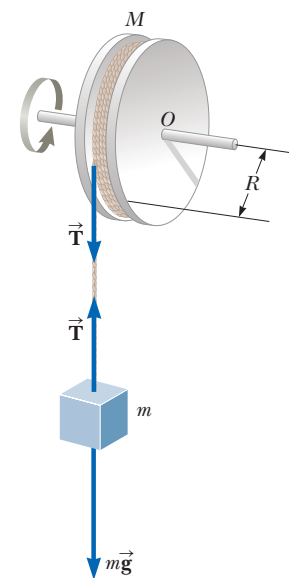


Figure 10.14 (Example 10.6) An object hangs from a cord wrapped around a wheel.

► 10.6 continued

normal force exerted by the axle on the wheel both pass through the axis of rotation and therefore produce no torque.)

From the rigid object under a net torque model, write Equation 10.18:

$$\sum \tau_{\text{ext}} = I\alpha$$

Solve for α and substitute the net torque:

$$(1) \quad \alpha = \frac{\sum \tau_{\text{ext}}}{I} = \frac{TR}{I}$$

From the particle under a net force model, apply Newton's second law to the motion of the object, taking the downward direction to be positive:

$$\sum F_y = mg - T = ma$$

Solve for the acceleration a :

$$(2) \quad a = \frac{mg - T}{m}$$

Equations (1) and (2) have three unknowns: α , a , and T . Because the object and wheel are connected by a cord that does not slip, the translational acceleration of the suspended object is equal to the tangential acceleration of a point on the wheel's rim. Therefore, the angular acceleration α of the wheel and the translational acceleration of the object are related by $a = R\alpha$.

Use this fact together with Equations (1) and (2):

$$(3) \quad a = R\alpha = \frac{TR^2}{I} = \frac{mg - T}{m}$$

Solve for the tension T :

$$(4) \quad T = \frac{mg}{1 + (mR^2/I)}$$

Substitute Equation (4) into Equation (2) and solve for a :

$$(5) \quad a = \frac{g}{1 + (I/mR^2)}$$

Use $a = R\alpha$ and Equation (5) to solve for α :

$$\alpha = \frac{a}{R} = \frac{g}{R + (I/mR)}$$

Finalize We finalize this problem by imagining the behavior of the system in some extreme limits.

WHAT IF? What if the wheel were to become very massive so that I becomes very large? What happens to the acceleration a of the object and the tension T ?

Answer If the wheel becomes infinitely massive, we can imagine that the object of mass m will simply hang from the cord without causing the wheel to rotate.

We can show that mathematically by taking the limit $I \rightarrow \infty$. Equation (5) then becomes

$$a = \frac{g}{1 + (I/mR^2)} \rightarrow 0$$

which agrees with our conceptual conclusion that the object will hang at rest. Also, Equation (4) becomes

$$T = \frac{mg}{1 + (mR^2/I)} \rightarrow mg$$

which is consistent because the object simply hangs at rest in equilibrium between the gravitational force and the tension in the string.

10.6 Calculation of Moments of Inertia

The moment of inertia of a system of discrete particles can be calculated in a straightforward way with Equation 10.19. We can evaluate the moment of inertia of a continuous rigid object by imagining the object to be divided into many small elements, each of which has mass Δm_i . We use the definition $I = \sum_i r_i^2 \Delta m_i$

and take the limit of this sum as $\Delta m_i \rightarrow 0$. In this limit, the sum becomes an integral over the volume of the object:

Moment of inertia of a rigid object ▶

$$I = \lim_{\Delta m_i \rightarrow 0} \sum_i r_i^2 \Delta m_i = \int r^2 dm \quad (10.20)$$

It is usually easier to calculate moments of inertia in terms of the volume of the elements rather than their mass, and we can easily make that change by using Equation 1.1, $\rho \equiv m/V$, where ρ is the density of the object and V is its volume. From this equation, the mass of a small element is $dm = \rho dV$. Substituting this result into Equation 10.20 gives

$$I = \int \rho r^2 dV \quad (10.21)$$

If the object is homogeneous, ρ is constant and the integral can be evaluated for a known geometry. If ρ is not constant, its variation with position must be known to complete the integration.

The density given by $\rho = m/V$ sometimes is referred to as *volumetric mass density* because it represents mass per unit volume. Often we use other ways of expressing density. For instance, when dealing with a sheet of uniform thickness t , we can define a *surface mass density* $\sigma = \rho t$, which represents *mass per unit area*. Finally, when mass is distributed along a rod of uniform cross-sectional area A , we sometimes use *linear mass density* $\lambda = M/L = \rho A$, which is the *mass per unit length*.

Example 10.7 Uniform Rigid Rod

Calculate the moment of inertia of a uniform thin rod of length L and mass M (Fig. 10.15) about an axis perpendicular to the rod (the y' axis) and passing through its center of mass.

SOLUTION

Conceptualize Imagine twirling the rod in Figure 10.15 with your fingers around its midpoint. If you have a meterstick handy, use it to simulate the spinning of a thin rod and feel the resistance it offers to being spun.

Categorize This example is a substitution problem, using the definition of moment of inertia in Equation 10.20. As with any integration problem, the solution involves reducing the integrand to a single variable.

The shaded length element dx' in Figure 10.15 has a mass dm equal to the mass per unit length λ multiplied by dx' .

Express dm in terms of dx' :

$$dm = \lambda dx' = \frac{M}{L} dx'$$

Substitute this expression into Equation 10.20, with $r^2 = (x')^2$:

$$\begin{aligned} I_{y'} &= \int r^2 dm = \int_{-L/2}^{L/2} (x')^2 \frac{M}{L} dx' = \frac{M}{L} \int_{-L/2}^{L/2} (x')^2 dx' \\ &= \frac{M}{L} \left[\frac{(x')^3}{3} \right]_{-L/2}^{L/2} = \frac{1}{12} ML^2 \end{aligned}$$

Check this result in Table 10.2.

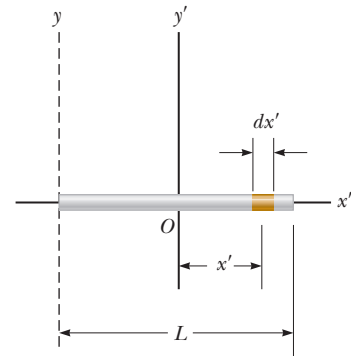


Figure 10.15 (Example 10.7) A uniform rigid rod of length L . The moment of inertia about the y' axis is less than that about the y axis. The latter axis is examined in Example 10.9.

Example 10.8 Uniform Solid Cylinder

A uniform solid cylinder has a radius R , mass M , and length L . Calculate its moment of inertia about its central axis (the z axis in Fig. 10.16).

10.8 continued

SOLUTION

Conceptualize To simulate this situation, imagine twirling a can of frozen juice around its central axis. Don't twirl a nonfrozen can of vegetable soup; it is not a rigid object! The liquid is able to move relative to the metal can.

Categorize This example is a substitution problem, using the definition of moment of inertia. As with Example 10.7, we must reduce the integrand to a single variable.

It is convenient to divide the cylinder into many cylindrical shells, each having radius r , thickness dr , and length L as shown in Figure 10.16. The density of the cylinder is ρ . The volume dV of each shell is its cross-sectional area multiplied by its length: $dV = L dA = L(2\pi r) dr$.

Express dm in terms of dr :

$$dm = \rho dV = \rho L(2\pi r) dr$$

Substitute this expression into Equation 10.20:

$$I_z = \int r^2 dm = \int r^2 [\rho L(2\pi r) dr] = 2\pi\rho L \int_0^R r^3 dr = \frac{1}{2}\pi\rho LR^4$$

Use the total volume $\pi R^2 L$ of the cylinder to express its density:

$$\rho = \frac{M}{V} = \frac{M}{\pi R^2 L}$$

Substitute this value into the expression for I_z :

$$I_z = \frac{1}{2}\pi \left(\frac{M}{\pi R^2 L} \right) LR^4 = \frac{1}{2}MR^2$$

Check this result in Table 10.2.

WHAT IF? What if the length of the cylinder in Figure 10.16 is increased to $2L$, while the mass M and radius R are held fixed? How does that change the moment of inertia of the cylinder?

Answer Notice that the result for the moment of inertia of a cylinder does not depend on L , the length of the cylinder. It applies equally well to a long cylinder and a flat disk having the same mass M and radius R . Therefore, the moment of inertia of the cylinder is not affected by how the mass is distributed along its length.

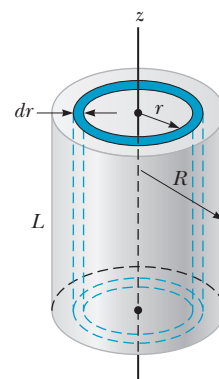


Figure 10.16 (Example 10.8) Calculating I about the z axis for a uniform solid cylinder.

The calculation of moments of inertia of an object about an arbitrary axis can be cumbersome, even for a highly symmetric object. Fortunately, use of an important theorem, called the **parallel-axis theorem**, often simplifies the calculation.

To generate the parallel-axis theorem, suppose the object in Figure 10.17a on page 310 rotates about the z axis. The moment of inertia does not depend on how the mass is distributed along the z axis; as we found in Example 10.8, the moment of inertia of a cylinder is independent of its length. Imagine collapsing the three-dimensional object into a planar object as in Figure 10.17b. In this imaginary process, all mass moves parallel to the z axis until it lies in the xy plane. The coordinates of the object's center of mass are now x_{CM} , y_{CM} , and $z_{\text{CM}} = 0$. Let the mass element dm have coordinates $(x, y, 0)$ as shown in the view down the z axis in Figure 10.17c. Because this element is a distance $r = \sqrt{x^2 + y^2}$ from the z axis, the moment of inertia of the entire object about the z axis is

$$I = \int r^2 dm = \int (x^2 + y^2) dm$$

We can relate the coordinates x, y of the mass element dm to the coordinates of this same element located in a coordinate system having the object's center of mass as its origin. If the coordinates of the center of mass are x_{CM} , y_{CM} , and $z_{\text{CM}} = 0$ in the original coordinate system centered on O , we see from Figure 10.17c that

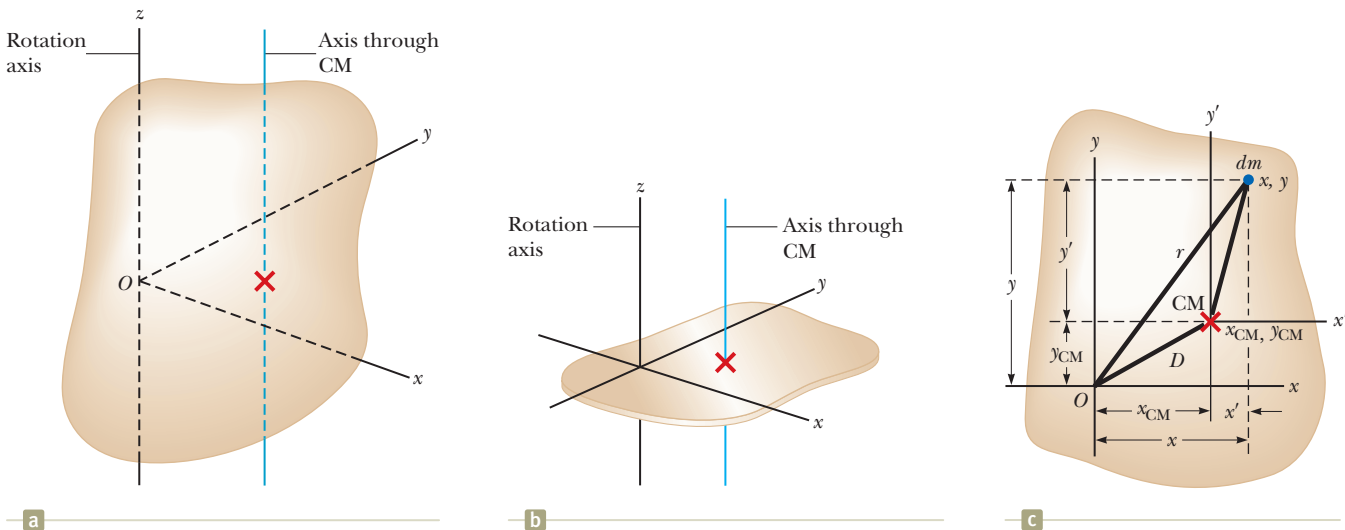


Figure 10.17 (a) An arbitrarily shaped rigid object. The origin of the coordinate system is not at the center of mass of the object. Imagine the object rotating about the z axis. (b) All mass elements of the object are collapsed parallel to the z axis to form a planar object. (c) An arbitrary mass element dm is indicated in blue in this view down the z axis. The parallel axis theorem can be used with the geometry shown to determine the moment of inertia of the original object around the z axis.

the relationships between the unprimed and primed coordinates are $x = x' + x_{\text{CM}}$, $y = y' + y_{\text{CM}}$, and $z = z' = 0$. Therefore,

$$\begin{aligned}
 I &= \int [(x' + x_{\text{CM}})^2 + (y' + y_{\text{CM}})^2] dm \\
 &= \int [(x')^2 + (y')^2] dm + 2x_{\text{CM}} \int x' dm + 2y_{\text{CM}} \int y' dm + (x_{\text{CM}}^2 + y_{\text{CM}}^2) \int dm
 \end{aligned}$$

The first integral is, by definition, the moment of inertia I_{CM} about an axis that is parallel to the z axis and passes through the center of mass. The second two integrals are zero because, by definition of the center of mass, $\int x' dm = \int y' dm = 0$. The last integral is simply MD^2 because $\int dm = M$ and $D^2 = x_{\text{CM}}^2 + y_{\text{CM}}^2$. Therefore, we conclude that

Parallel-axis theorem ▶

$$I = I_{\text{CM}} + MD^2 \quad (10.22)$$

Example 10.9 Applying the Parallel-Axis Theorem

Consider once again the uniform rigid rod of mass M and length L shown in Figure 10.15. Find the moment of inertia of the rod about an axis perpendicular to the rod through one end (the y axis in Fig. 10.15).

SOLUTION

Conceptualize Imagine twirling the rod around an endpoint rather than the midpoint. If you have a meterstick handy, try it and notice the degree of difficulty in rotating it around the end compared with rotating it around the center.

Categorize This example is a substitution problem, involving the parallel-axis theorem.

Intuitively, we expect the moment of inertia to be greater than the result $I_{\text{CM}} = \frac{1}{12}ML^2$ from Example 10.7 because there is mass up to a distance of L away from the rotation axis, whereas the farthest distance in Example 10.7 was only $L/2$. The distance between the center-of-mass axis and the y axis is $D = L/2$.

10.9 continued

Use the parallel-axis theorem:

Check this result in Table 10.2.

$$I = I_{\text{CM}} + MD^2 = \frac{1}{12}ML^2 + M\left(\frac{L}{2}\right)^2 = \frac{1}{3}ML^2$$

10.7 Rotational Kinetic Energy

After investigating the role of forces in our study of translational motion, we turned our attention to approaches involving energy. We do the same thing in our current study of rotational motion.

In Chapter 7, we defined the kinetic energy of an object as the energy associated with its motion through space. An object rotating about a fixed axis remains stationary in space, so there is no kinetic energy associated with translational motion. The individual particles making up the rotating object, however, are moving through space; they follow circular paths. Consequently, there is kinetic energy associated with rotational motion.

Let us consider an object as a system of particles and assume it rotates about a fixed z axis with an angular speed ω . Figure 10.18 shows the rotating object and identifies one particle on the object located at a distance r_i from the rotation axis. If the mass of the i th particle is m_i and its tangential speed is v_i , its kinetic energy is

$$K_i = \frac{1}{2}m_i v_i^2$$

To proceed further, recall that although every particle in the rigid object has the same angular speed ω , the individual tangential speeds depend on the distance r_i from the axis of rotation according to Equation 10.10. The *total* kinetic energy of the rotating rigid object is the sum of the kinetic energies of the individual particles:

$$K_R = \sum_i K_i = \sum_i \frac{1}{2}m_i v_i^2 = \frac{1}{2} \sum_i m_i r_i^2 \omega^2$$

We can write this expression in the form

$$K_R = \frac{1}{2} \left(\sum_i m_i r_i^2 \right) \omega^2 \quad (10.23)$$

where we have factored ω^2 from the sum because it is common to every particle. We recognize the quantity in parentheses as the moment of inertia of the object, introduced in Section 10.5.

Therefore, Equation 10.23 can be written

$$K_R = \frac{1}{2}I\omega^2 \quad (10.24)$$

Although we commonly refer to the quantity $\frac{1}{2}I\omega^2$ as **rotational kinetic energy**, it is not a new form of energy. It is ordinary kinetic energy because it is derived from a sum over individual kinetic energies of the particles contained in the rigid object. The mathematical form of the kinetic energy given by Equation 10.24 is convenient when we are dealing with rotational motion, provided we know how to calculate I .

- Quick Quiz 10.6** A section of hollow pipe and a solid cylinder have the same radius, mass, and length. They both rotate about their long central axes with the same angular speed. Which object has the higher rotational kinetic energy?
- (a) The hollow pipe does. (b) The solid cylinder does. (c) They have the same rotational kinetic energy. (d) It is impossible to determine.

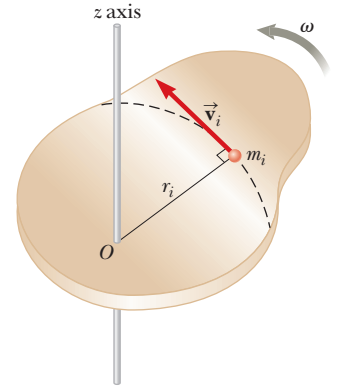


Figure 10.18 A rigid object rotating about the z axis with angular speed ω . The kinetic energy of the particle of mass m_i is $\frac{1}{2}m_i v_i^2$. The total kinetic energy of the object is called its rotational kinetic energy.

Rotational kinetic energy

Example 10.10 An Unusual Baton

Four tiny spheres are fastened to the ends of two rods of negligible mass lying in the xy plane to form an unusual baton (Fig. 10.19). We shall assume the radii of the spheres are small compared with the dimensions of the rods.

(A) If the system rotates about the y axis (Fig. 10.19a) with an angular speed ω , find the moment of inertia and the rotational kinetic energy of the system about this axis.

SOLUTION

Conceptualize Figure 10.19 is a pictorial representation that helps conceptualize the system of spheres and how it spins. Model the spheres as particles.

Categorize This example is a substitution problem because it is a straightforward application of the definitions discussed in this section.

Apply Equation 10.19 to the system:

Evaluate the rotational kinetic energy using Equation 10.24:

That the two spheres of mass m do not enter into this result makes sense because they have no motion about the axis of rotation; hence, they have no rotational kinetic energy. By similar logic, we expect the moment of inertia about the x axis to be $I_x = 2mb^2$ with a rotational kinetic energy about that axis of $K_R = mb^2\omega^2$.

(B) Suppose the system rotates in the xy plane about an axis (the z axis) through the center of the baton (Fig. 10.19b). Calculate the moment of inertia and rotational kinetic energy about this axis.

SOLUTION

Apply Equation 10.19 for this new rotation axis:

Evaluate the rotational kinetic energy using Equation 10.24:

Comparing the results for parts (A) and (B), we conclude that the moment of inertia and therefore the rotational kinetic energy associated with a given angular speed depend on the axis of rotation. In part (B), we expect the result to include all four spheres and distances because all four spheres are rotating in the xy plane. Based on the work–kinetic energy theorem, the smaller rotational kinetic energy in part (A) than in part (B) indicates it would require less work to set the system into rotation about the y axis than about the z axis.

WHAT IF? What if the mass M is much larger than m ? How do the answers to parts (A) and (B) compare?

Answer If $M \gg m$, then m can be neglected and the moment of inertia and the rotational kinetic energy in part (B) become

$$I_z = 2Ma^2 \quad \text{and} \quad K_R = Ma^2\omega^2$$

which are the same as the answers in part (A). If the masses m of the two tan spheres in Figure 10.19 are negligible, these spheres can be removed from the figure and rotations about the y and z axes are equivalent.

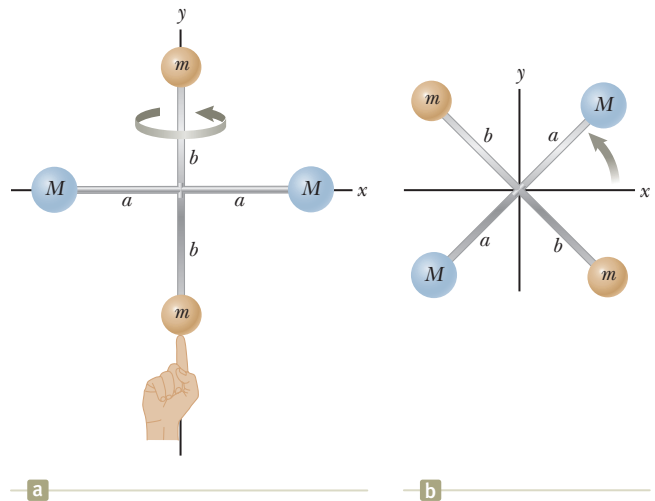


Figure 10.19 (Example 10.10) Four spheres form an unusual baton. (a) The baton is rotated about the y axis. (b) The baton is rotated about the z axis.

$$I_y = \sum_i m_i r_i^2 = Ma^2 + Ma^2 = 2Ma^2$$

$$K_R = \frac{1}{2}I_y\omega^2 = \frac{1}{2}(2Ma^2)\omega^2 = Ma^2\omega^2$$

$$I_z = \sum_i m_i r_i^2 = Ma^2 + Ma^2 + mb^2 + mb^2 = 2Ma^2 + 2mb^2$$

$$K_R = \frac{1}{2}I_z\omega^2 = \frac{1}{2}(2Ma^2 + 2mb^2)\omega^2 = (Ma^2 + mb^2)\omega^2$$

10.8 Energy Considerations in Rotational Motion

Having introduced rotational kinetic energy in Section 10.7, let us now see how an energy approach can be useful in solving rotational problems. We begin by considering the relationship between the torque acting on a rigid object and its resulting

rotational motion so as to generate expressions for power and a rotational analog to the work–kinetic energy theorem. Consider the rigid object pivoted at O in Figure 10.20. Suppose a single external force $\vec{\mathbf{F}}$ is applied at P , where $\vec{\mathbf{F}}$ lies in the plane of the page. The work done on the object by $\vec{\mathbf{F}}$ as its point of application rotates through an infinitesimal distance $d\vec{\mathbf{s}} = r d\theta$ is

$$dW = \vec{\mathbf{F}} \cdot d\vec{\mathbf{s}} = (F \sin \phi) r d\theta$$

where $F \sin \phi$ is the tangential component of $\vec{\mathbf{F}}$, or, in other words, the component of the force along the displacement. Notice that the radial component vector of $\vec{\mathbf{F}}$ does no work on the object because it is perpendicular to the displacement of the point of application of $\vec{\mathbf{F}}$.

Because the magnitude of the torque due to $\vec{\mathbf{F}}$ about an axis through O is defined as $rF \sin \phi$ by Equation 10.14, we can write the work done for the infinitesimal rotation as

$$dW = \tau d\theta \quad (10.25)$$

The rate at which work is being done by $\vec{\mathbf{F}}$ as the object rotates about the fixed axis through the angle $d\theta$ in a time interval dt is

$$\frac{dW}{dt} = \tau \frac{d\theta}{dt}$$

Because dW/dt is the instantaneous power P (see Section 8.5) delivered by the force and $d\theta/dt = \omega$, this expression reduces to

$$P = \frac{dW}{dt} = \tau \omega \quad (10.26)$$

This equation is analogous to $P = Fv$ in the case of translational motion, and Equation 10.25 is analogous to $dW = F_x dx$.

In studying translational motion, we have seen that models based on an energy approach can be extremely useful in describing a system's behavior. From what we learned of translational motion, we expect that when a symmetric object rotates about a fixed axis, the work done by external forces equals the change in the rotational energy of the object.

To prove that fact, let us begin with the rigid object under a net torque model, whose mathematical representation is $\sum \tau_{\text{ext}} = I\alpha$. Using the chain rule from calculus, we can express the net torque as

$$\sum \tau_{\text{ext}} = I\alpha = I \frac{d\omega}{dt} = I \frac{d\omega}{d\theta} \frac{d\theta}{dt} = I \frac{d\omega}{d\theta} \omega$$

Rearranging this expression and noting that $\sum \tau_{\text{ext}} d\theta = dW$ gives

$$\sum \tau_{\text{ext}} d\theta = dW = I\omega d\omega$$

Integrating this expression, we obtain for the work W done by the net external force acting on a rotating system

$$W = \int_{\omega_i}^{\omega_f} I\omega d\omega = \frac{1}{2}I\omega_f^2 - \frac{1}{2}I\omega_i^2 \quad (10.27)$$

where the angular speed changes from ω_i to ω_f . Equation 10.27 is the **work–kinetic energy theorem for rotational motion**. Similar to the work–kinetic energy theorem in translational motion (Section 7.5), this theorem states that the net work done by external forces in rotating a symmetric rigid object about a fixed axis equals the change in the object's rotational energy.

This theorem is a form of the nonisolated system (energy) model discussed in Chapter 8. Work is done on the system of the rigid object, which represents a transfer of energy across the boundary of the system that appears as an increase in the object's rotational kinetic energy.

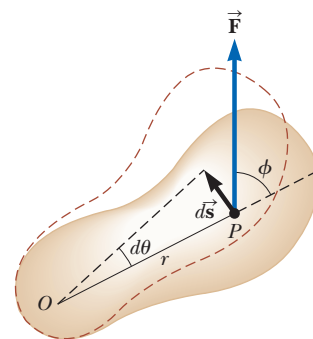


Figure 10.20 A rigid object rotates about an axis through O under the action of an external force $\vec{\mathbf{F}}$ applied at P .

◀ Power delivered to a rotating rigid object

◀ Work–kinetic energy theorem for rotational motion

Table 10.3 Useful Equations in Rotational and Translational Motion

Rotational Motion About a Fixed Axis	Translational Motion
Angular speed $\omega = d\theta/dt$	Translational speed $v = dx/dt$
Angular acceleration $\alpha = d\omega/dt$	Translational acceleration $a = dv/dt$
Net torque $\Sigma\tau_{\text{ext}} = I\alpha$	Net force $\Sigma F = ma$
If $\alpha = \text{constant}$ $\begin{cases} \omega_f = \omega_i + \alpha t \\ \theta_f = \theta_i + \omega_i t + \frac{1}{2}\alpha t^2 \\ \omega_f^2 = \omega_i^2 + 2\alpha(\theta_f - \theta_i) \end{cases}$	If $a = \text{constant}$ $\begin{cases} v_f = v_i + at \\ x_f = x_i + v_i t + \frac{1}{2}at^2 \\ v_f^2 = v_i^2 + 2a(x_f - x_i) \end{cases}$
Work $W = \int_{\theta_i}^{\theta_f} \tau d\theta$	Work $W = \int_{x_i}^{x_f} F_x dx$
Rotational kinetic energy $K_R = \frac{1}{2}I\omega^2$	Kinetic energy $K = \frac{1}{2}mv^2$
Power $P = \tau\omega$	Power $P = Fv$
Angular momentum $L = I\omega$	Linear momentum $p = mv$
Net torque $\Sigma\tau = dL/dt$	Net force $\Sigma F = dp/dt$

In general, we can combine this theorem with the translational form of the work–kinetic energy theorem from Chapter 7. Therefore, the net work done by external forces on an object is the change in its *total* kinetic energy, which is the sum of the translational and rotational kinetic energies. For example, when a pitcher throws a baseball, the work done by the pitcher’s hands appears as kinetic energy associated with the ball moving through space as well as rotational kinetic energy associated with the spinning of the ball.

In addition to the work–kinetic energy theorem, other energy principles can also be applied to rotational situations. For example, if a system involving rotating objects is isolated and no nonconservative forces act within the system, the isolated system model and the principle of conservation of mechanical energy can be used to analyze the system as in Example 10.11 below. In general, Equation 8.2, the conservation of energy equation, applies to rotational situations, with the recognition that the change in kinetic energy ΔK will include changes in both translational and rotational kinetic energies.

Finally, in some situations an energy approach does not provide enough information to solve the problem and it must be combined with a momentum approach. Such a case is illustrated in Example 10.14 in Section 10.9.

Table 10.3 lists the various equations we have discussed pertaining to rotational motion together with the analogous expressions for translational motion. Notice the similar mathematical forms of the equations. The last two equations in the left-hand column of Table 10.3, involving angular momentum L , are discussed in Chapter 11 and are included here only for the sake of completeness.

Example 10.11 Rotating Rod Revisited AM

A uniform rod of length L and mass M is free to rotate on a frictionless pin passing through one end (Fig. 10.21). The rod is released from rest in the horizontal position.

(A) What is its angular speed when the rod reaches its lowest position?

SOLUTION

Conceptualize Consider Figure 10.21 and imagine the rod rotating downward through a quarter turn about the pivot at the left end. Also look back at Example 10.8. This physical situation is the same.

Categorize As mentioned in Example 10.4, the angular acceleration of the rod is not constant. Therefore, the kinematic equations for rotation (Section 10.2) can-

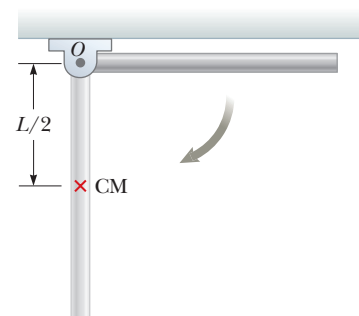


Figure 10.21 (Example 10.11) A uniform rigid rod pivoted at O rotates in a vertical plane under the action of the gravitational force.

▶ 10.11 continued

not be used to solve this example. We categorize the system of the rod and the Earth as an *isolated system* in terms of *energy* with no nonconservative forces acting and use the principle of conservation of mechanical energy.

Analyze We choose the configuration in which the rod is hanging straight down as the reference configuration for gravitational potential energy and assign a value of zero for this configuration. When the rod is in the horizontal position, it has no rotational kinetic energy. The potential energy of the system in this configuration relative to the reference configuration is $MgL/2$ because the center of mass of the rod is at a height $L/2$ higher than its position in the reference configuration. When the rod reaches its lowest position, the energy of the system is entirely rotational energy $\frac{1}{2}I\omega^2$, where I is the moment of inertia of the rod about an axis passing through the pivot.

Using the isolated system (energy) model, write an appropriate reduction of Equation 8.2:

$$\Delta K + \Delta U = 0$$

Substitute for each of the final and initial energies:

$$\left(\frac{1}{2}I\omega^2 - 0\right) + \left(0 - \frac{1}{2}MgL\right) = 0$$

Solve for ω and use $I = \frac{1}{3}ML^2$ (see Table 10.2) for the rod:

$$\omega = \sqrt{\frac{MgL}{I}} = \sqrt{\frac{MgL}{\frac{1}{3}ML^2}} = \sqrt{\frac{3g}{L}}$$

(B) Determine the tangential speed of the center of mass and the tangential speed of the lowest point on the rod when it is in the vertical position.

SOLUTION

Use Equation 10.10 and the result from part (A):

$$v_{\text{CM}} = r\omega = \frac{L}{2}\omega = \frac{1}{2}\sqrt{3gL}$$

Because r for the lowest point on the rod is twice what it is for the center of mass, the lowest point has a tangential speed twice that of the center of mass:

$$v = 2v_{\text{CM}} = \sqrt{3gL}$$

Finalize The initial configuration in this example is the same as that in Example 10.4. In Example 10.4, however, we could only find the initial angular acceleration of the rod. Applying an energy approach in the current example allows us to find additional information, the angular speed of the rod at the lowest point. Convince yourself that you could find the angular speed of the rod at any angular position by knowing the location of the center of mass at this position.

WHAT IF? What if we want to find the angular speed of the rod when the angle it makes with the horizontal is 45.0° ? Because this angle is half of 90.0° , for which we solved the problem above, is the angular speed at this configuration half the answer in the calculation above, that is, $\frac{1}{2}\sqrt{3g/L}$?

Answer Imagine the rod in Figure 10.21 at the 45.0° position. Use a pencil or a ruler to represent the rod at this position. Notice that the center of mass has dropped through more than half of the distance $L/2$ in this configuration. Therefore, more than half of the initial gravitational potential energy has been transformed to rotational kinetic energy. So, we should not expect the value of the angular speed to be as simple as proposed above.

Note that the center of mass of the rod drops through a distance of $0.500L$ as the rod reaches the vertical configuration. When the rod is at 45.0° to the horizontal, we can show that the center of mass of the rod drops through a distance of $0.354L$. Continuing the calculation, we find that the angular speed of the rod at this configuration is $0.841\sqrt{3g/L}$, (not $\frac{1}{2}\sqrt{3g/L}$).

Example 10.12 Energy and the Atwood Machine **AM**

Two blocks having different masses m_1 and m_2 are connected by a string passing over a pulley as shown in Figure 10.22 on page 316. The pulley has a radius R and moment of inertia I about its axis of rotation. The string does not slip on the pulley, and the system is released from rest. Find the translational speeds of the blocks after block 2 descends through a distance h and find the angular speed of the pulley at this time.

continued

10.12 continued

SOLUTION

Conceptualize We have already seen examples involving the Atwood machine, so the motion of the objects in Figure 10.22 should be easy to visualize.

Categorize Because the string does not slip, the pulley rotates about the axle. We can neglect friction in the axle because the axle's radius is small relative to that of the pulley. Hence, the frictional torque is much smaller than the net torque applied by the two blocks provided that their masses are significantly different. Consequently, the system consisting of the two blocks, the pulley, and the Earth is an *isolated system* in terms of *energy* with no nonconservative forces acting; therefore, the mechanical energy of the system is conserved.

Analyze We define the zero configuration for gravitational potential energy as that which exists when the system is released. From Figure 10.22, we see that the descent of block 2 is associated with a decrease in system potential energy and that the rise of block 1 represents an increase in potential energy.

Using the isolated system (energy) model, write an appropriate reduction of the conservation of energy equation:

$$\Delta K + \Delta U = 0$$

Substitute for each of the energies:

$$\left[\left(\frac{1}{2} m_1 v_f^2 + \frac{1}{2} m_2 v_f^2 + \frac{1}{2} I \omega_f^2 \right) - 0 \right] + \left[(m_1 g h - m_2 g h) - 0 \right] = 0$$

Use $v_f = R\omega_f$ to substitute for ω_f :

$$\frac{1}{2} m_1 v_f^2 + \frac{1}{2} m_2 v_f^2 + \frac{1}{2} I \frac{v_f^2}{R^2} = m_2 g h - m_1 g h$$

$$\frac{1}{2} \left(m_1 + m_2 + \frac{I}{R^2} \right) v_f^2 = (m_2 - m_1) g h$$

Solve for v_f :

$$(1) \quad v_f = \left[\frac{2(m_2 - m_1) g h}{m_1 + m_2 + I/R^2} \right]^{1/2}$$

Use $v_f = R\omega_f$ to solve for ω_f :

$$\omega_f = \frac{v_f}{R} = \frac{1}{R} \left[\frac{2(m_2 - m_1) g h}{m_1 + m_2 + I/R^2} \right]^{1/2}$$

Finalize Each block can be modeled as a *particle under constant acceleration* because it experiences a constant net force. Think about what you would need to do to use Equation (1) to find the acceleration of one of the blocks. Then imagine the pulley becoming massless and determine the acceleration of a block. How does this result compare with the result of Example 5.9?

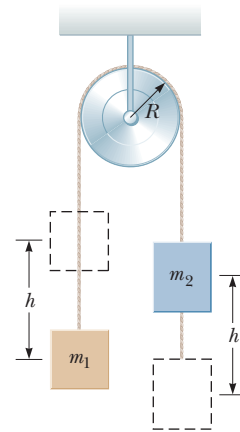


Figure 10.22 (Example 10.12) An Atwood machine with a massive pulley.

10.9 Rolling Motion of a Rigid Object

In this section, we treat the motion of a rigid object rolling along a flat surface. In general, such motion is complex. For example, suppose a cylinder is rolling on a straight path such that the axis of rotation remains parallel to its initial orientation in space. As Figure 10.23 shows, a point on the rim of the cylinder moves in a complex path called a *cycloid*. We can simplify matters, however, by focusing on the center of mass rather than on a point on the rim of the rolling object. As shown in Figure 10.23, the center of mass moves in a straight line. If an object such as a cylinder rolls without slipping on the surface (called *pure rolling motion*), a simple relationship exists between its rotational and translational motions.

Consider a uniform cylinder of radius R rolling without slipping on a horizontal surface (Fig. 10.24). As the cylinder rotates through an angle θ , its center of mass

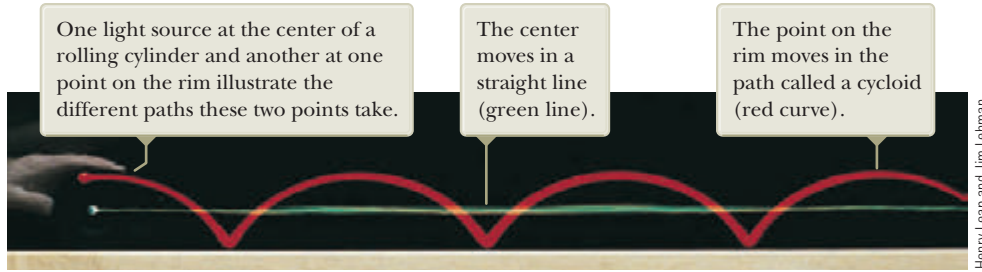


Figure 10.23 Two points on a rolling object take different paths through space.

moves a linear distance $s = R\theta$ (see Eq. 10.1a). Therefore, the translational speed of the center of mass for pure rolling motion is given by

$$v_{CM} = \frac{ds}{dt} = R \frac{d\theta}{dt} = R\omega \quad (10.28)$$

where ω is the angular speed of the cylinder. Equation 10.28 holds whenever a cylinder or sphere rolls without slipping and is the **condition for pure rolling motion**. The magnitude of the linear acceleration of the center of mass for pure rolling motion is

$$a_{CM} = \frac{dv_{CM}}{dt} = R \frac{d\omega}{dt} = R\alpha \quad (10.29)$$

where α is the angular acceleration of the cylinder.

Imagine that you are moving along with a rolling object at speed v_{CM} , staying in a frame of reference at rest with respect to the center of mass of the object. As you observe the object, you will see the object in pure rotation around its center of mass. Figure 10.25a shows the velocities of points at the top, center, and bottom of the object as observed by you. In addition to these velocities, every point on the object moves in the same direction with speed v_{CM} relative to the surface on which it rolls. Figure 10.25b shows these velocities for a nonrotating object. In the reference frame at rest with respect to the surface, the velocity of a given point on the object is the sum of the velocities shown in Figures 10.25a and 10.25b. Figure 10.25c shows the results of adding these velocities.

Notice that the contact point between the surface and object in Figure 10.25c has a translational speed of zero. At this instant, the rolling object is moving in exactly the same way as if the surface were removed and the object were pivoted at point P and spun about an axis passing through P . We can express the total kinetic energy of this imagined spinning object as

$$K = \frac{1}{2} I_P \omega^2 \quad (10.30)$$

where I_P is the moment of inertia about a rotation axis through P .

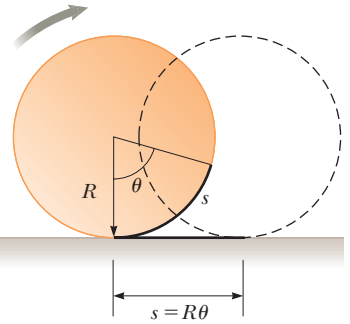
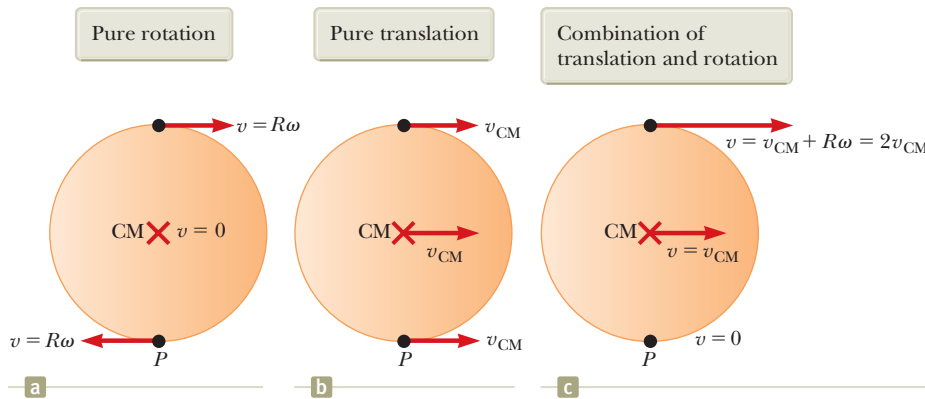


Figure 10.24 For pure rolling motion, as the cylinder rotates through an angle θ its center moves a linear distance $s = R\theta$.

Pitfall Prevention 10.6

Equation 10.28 Looks Familiar Equation 10.28 looks very similar to Equation 10.10, so be sure to be clear on the difference. Equation 10.10 gives the *tangential* speed of a point on a *rotating* object located a distance r from a fixed rotation axis if the object is rotating with angular speed ω . Equation 10.28 gives the *translational* speed of the center of mass of a *rolling* object of radius R rotating with angular speed ω .

Figure 10.25 The motion of a rolling object can be modeled as a combination of pure translation and pure rotation.

Because the motion of the imagined spinning object is the same at this instant as our actual rolling object, Equation 10.30 also gives the kinetic energy of the rolling object. Applying the parallel-axis theorem, we can substitute $I_p = I_{\text{CM}} + MR^2$ into Equation 10.30 to obtain

$$K = \frac{1}{2}I_{\text{CM}}\omega^2 + \frac{1}{2}MR^2\omega^2$$

Using $v_{\text{CM}} = R\omega$, this equation can be expressed as

$$K = \frac{1}{2}I_{\text{CM}}\omega^2 + \frac{1}{2}Mv_{\text{CM}}^2 \quad (10.31)$$

The term $\frac{1}{2}I_{\text{CM}}\omega^2$ represents the rotational kinetic energy of the object about its center of mass, and the term $\frac{1}{2}Mv_{\text{CM}}^2$ represents the kinetic energy the object would have if it were just translating through space without rotating. Therefore, the total kinetic energy of a rolling object is the sum of the rotational kinetic energy *about* the center of mass and the translational kinetic energy *of* the center of mass. This statement is consistent with the situation illustrated in Figure 10.25, which shows that the velocity of a point on the object is the sum of the velocity of the center of mass and the tangential velocity around the center of mass.

Energy methods can be used to treat a class of problems concerning the rolling motion of an object on a rough incline. For example, consider Figure 10.26, which shows a sphere rolling without slipping after being released from rest at the top of the incline. Accelerated rolling motion is possible only if a friction force is present between the sphere and the incline to produce a net torque about the center of mass. Despite the presence of friction, no loss of mechanical energy occurs because the contact point is at rest relative to the surface at any instant. (On the other hand, if the sphere were to slip, mechanical energy of the sphere–incline–Earth system would decrease due to the nonconservative force of kinetic friction.)

In reality, *rolling friction* causes mechanical energy to transform to internal energy. Rolling friction is due to deformations of the surface and the rolling object. For example, automobile tires flex as they roll on a roadway, representing a transformation of mechanical energy to internal energy. The roadway also deforms a small amount, representing additional rolling friction. In our problem-solving models, we ignore rolling friction unless stated otherwise.

Using $v_{\text{CM}} = R\omega$ for pure rolling motion, we can express Equation 10.31 as

$$K = \frac{1}{2}I_{\text{CM}}\left(\frac{v_{\text{CM}}}{R}\right)^2 + \frac{1}{2}Mv_{\text{CM}}^2$$

$$K = \frac{1}{2}\left(\frac{I_{\text{CM}}}{R^2} + M\right)v_{\text{CM}}^2 \quad (10.32)$$

For the sphere–Earth system in Figure 10.26, we define the zero configuration of gravitational potential energy to be when the sphere is at the bottom of the incline. Therefore, Equation 8.2 gives

$$\Delta K + \Delta U = 0$$

$$\left[\frac{1}{2}\left(\frac{I_{\text{CM}}}{R^2} + M\right)v_{\text{CM}}^2 - 0\right] + (0 - Mgh) = 0$$

$$v_{\text{CM}} = \left[\frac{2gh}{1 + (I_{\text{CM}}/MR^2)}\right]^{1/2} \quad (10.33)$$

- Quick Quiz 10.7** A ball rolls without slipping down incline A, starting from rest. At the same time, a box starts from rest and slides down incline B, which is identical to incline A except that it is frictionless. Which arrives at the bottom first?
- (a) The ball arrives first. (b) The box arrives first. (c) Both arrive at the same time. (d) It is impossible to determine.

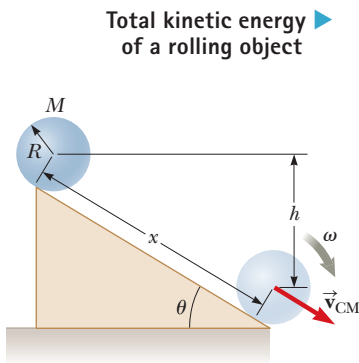


Figure 10.26 A sphere rolling down an incline. Mechanical energy of the sphere–Earth system is conserved if no slipping occurs.

Example 10.13 Sphere Rolling Down an Incline AM

For the solid sphere shown in Figure 10.26, calculate the translational speed of the center of mass at the bottom of the incline and the magnitude of the translational acceleration of the center of mass.

SOLUTION

Conceptualize Imagine rolling the sphere down the incline. Compare it in your mind to a book sliding down a frictionless incline. You probably have experience with objects rolling down inclines and may be tempted to think that the sphere would move down the incline faster than the book. You do *not*, however, have experience with objects sliding down *frictionless* inclines! So, which object will reach the bottom first? (See Quick Quiz 10.7.)

Categorize We model the sphere and the Earth as an *isolated system* in terms of *energy* with no nonconservative forces acting. This model is the one that led to Equation 10.33, so we can use that result.

Analyze Evaluate the speed of the center of mass of the sphere from Equation 10.33:

$$(1) \quad v_{\text{CM}} = \left[\frac{2gh}{1 + \left(\frac{2}{5}MR^2/MR^2\right)} \right]^{1/2} = \left(\frac{10}{7}gh\right)^{1/2}$$

This result is less than $\sqrt{2gh}$, which is the speed an object would have if it simply slid down the incline without rotating. (Eliminate the rotation by setting $I_{\text{CM}} = 0$ in Eq. 10.33.)

To calculate the translational acceleration of the center of mass, notice that the vertical displacement of the sphere is related to the distance x it moves along the incline through the relationship $h = x \sin \theta$.

Use this relationship to rewrite Equation (1):

$$v_{\text{CM}}^2 = \frac{10}{7}gx \sin \theta$$

Write Equation 2.17 for an object starting from rest and moving through a distance x under constant acceleration:

$$v_{\text{CM}}^2 = 2a_{\text{CM}}x$$

Equate the preceding two expressions to find a_{CM} :

$$a_{\text{CM}} = \frac{5}{7}g \sin \theta$$

Finalize Both the speed and the acceleration of the center of mass are *independent* of the mass and the radius of the sphere. That is, all homogeneous solid spheres experience the same speed and acceleration on a given incline. Try to verify this statement experimentally with balls of different sizes, such as a marble and a croquet ball.

If we were to repeat the acceleration calculation for a hollow sphere, a solid cylinder, or a hoop, we would obtain similar results in which only the factor in front of $g \sin \theta$ would differ. The constant factors that appear in the expressions for v_{CM} and a_{CM} depend only on the moment of inertia about the center of mass for the specific object. In all cases, the acceleration of the center of mass is *less* than $g \sin \theta$, the value the acceleration would have if the incline were frictionless and no rolling occurred.

Example 10.14 Pulling on a Spool³ AM

A cylindrically symmetric spool of mass m and radius R sits at rest on a horizontal table with friction (Fig. 10.27). With your hand on a light string wrapped around the axle of radius r , you pull on the spool with a constant horizontal force of magnitude T to the right. As a result, the spool rolls without slipping a distance L along the table with no rolling friction.

(A) Find the final translational speed of the center of mass of the spool.

SOLUTION

Conceptualize Use Figure 10.27 to visualize the motion of the spool when you pull the string. For the spool to roll through a distance L , notice that your hand on the string must pull through a distance *different* from L .

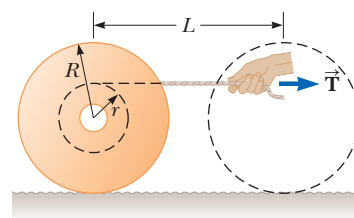


Figure 10.27 (Example 10.14) A spool rests on a horizontal table. A string is wrapped around the axle and is pulled to the right by a hand.

continued

³Example 10.14 was inspired in part by C. E. Mungan, "A primer on work–energy relationships for introductory physics," *The Physics Teacher*, 43:10, 2005.

▶ 10.14 continued

Categorize The spool is a *rigid object under a net torque*, but the net torque includes that due to the friction force at the bottom of the spool, about which we know nothing. Therefore, an approach based on the rigid object under a net torque model will not be successful. Work is done by your hand on the spool and string, which form a nonisolated system in terms of energy. Let's see if an approach based on the *nonisolated system (energy)* model is fruitful.

Analyze The only type of energy that changes in the system is the kinetic energy of the spool. There is no rolling friction, so there is no change in internal energy. The only way that energy crosses the system's boundary is by the work done by your hand on the string. No work is done by the static force of friction on the bottom of the spool (to the left in Fig. 10.27) because the point of application of the force moves through no displacement.

Write the appropriate reduction of the conservation of energy equation, Equation 8.2:

$$(1) \quad W = \Delta K = \Delta K_{\text{trans}} + \Delta K_{\text{rot}}$$

where W is the work done on the string by your hand. To find this work, we need to find the displacement of your hand during the process.

We first find the length of string that has unwound off the spool. If the spool rolls through a distance L , the total angle through which it rotates is $\theta = L/R$. The axle also rotates through this angle.

Use Equation 10.1a to find the total arc length through which the axle turns:

$$\ell = r\theta = \frac{r}{R}L$$

This result also gives the length of string pulled off the axle. Your hand will move through this distance *plus* the distance L through which the spool moves. Therefore, the magnitude of the displacement of the point of application of the force applied by your hand is $\ell + L = L(1 + r/R)$.

Evaluate the work done by your hand on the string:

$$(2) \quad W = TL\left(1 + \frac{r}{R}\right)$$

Substitute Equation (2) into Equation (1):

$$TL\left(1 + \frac{r}{R}\right) = \frac{1}{2}mv_{\text{CM}}^2 + \frac{1}{2}I\omega^2$$

where I is the moment of inertia of the spool about its center of mass and v_{CM} and ω are the final values after the wheel rolls through the distance L .

Apply the nonslip rolling condition $\omega = v_{\text{CM}}/R$:

$$TL\left(1 + \frac{r}{R}\right) = \frac{1}{2}mv_{\text{CM}}^2 + \frac{1}{2}I\frac{v_{\text{CM}}^2}{R^2}$$

Solve for v_{CM} :

$$(3) \quad v_{\text{CM}} = \sqrt{\frac{2TL(1 + r/R)}{m(1 + I/mR^2)}}$$

(B) Find the value of the friction force f .

SOLUTION

Categorize Because the friction force does no work, we cannot evaluate it from an energy approach. We model the spool as a *nonisolated system*, but this time in terms of *momentum*. The string applies a force across the boundary of the system, resulting in an impulse on the system. Because the forces on the spool are constant, we can model the spool's center of mass as a *particle under constant acceleration*.

Analyze Write the impulse–momentum theorem (Eq. 9.40) for the spool:

$$m(v_{\text{CM}} - 0) = (T - f)\Delta t$$

$$(4) \quad mv_{\text{CM}} = (T - f)\Delta t$$

For a particle under constant acceleration starting from rest, Equation 2.14 tells us that the average velocity of the center of mass is half the final velocity.

Use Equation 2.2 to find the time interval for the center of mass of the spool to move a distance L from rest to a final speed v_{CM} :

$$(5) \quad \Delta t = \frac{L}{v_{\text{CM,avg}}} = \frac{2L}{v_{\text{CM}}}$$

10.14 continued

Substitute Equation (5) into Equation (4):

$$mv_{\text{CM}} = (T - f) \frac{2L}{v_{\text{CM}}}$$

Solve for the friction force f :

$$f = T - \frac{mv_{\text{CM}}^2}{2L}$$

Substitute v_{CM} from Equation (3):

$$\begin{aligned} f &= T - \frac{m}{2L} \left[\frac{2TL(1 + r/R)}{m(1 + I/mR^2)} \right] \\ &= T - T \frac{(1 + r/R)}{(1 + I/mR^2)} = T \left[\frac{I - mrR}{I + mR^2} \right] \end{aligned}$$

Finalize Notice that we could use the impulse–momentum theorem for the translational motion of the pool while ignoring that the pool is rotating! This fact demonstrates the power of our growing list of approaches to solving problems.

Summary

Definitions

The **angular position** of a rigid object is defined as the angle θ between a reference line attached to the object and a reference line fixed in space. The **angular displacement** of a particle moving in a circular path or a rigid object rotating about a fixed axis is $\Delta\theta \equiv \theta_f - \theta_i$.

The **instantaneous angular speed** of a particle moving in a circular path or of a rigid object rotating about a fixed axis is

$$\omega \equiv \frac{d\theta}{dt} \quad (10.3)$$

The **instantaneous angular acceleration** of a particle moving in a circular path or of a rigid object rotating about a fixed axis is

$$\alpha \equiv \frac{d\omega}{dt} \quad (10.5)$$

When a rigid object rotates about a fixed axis, every part of the object has the same angular speed and the same angular acceleration.

The magnitude of the **torque** associated with a force \vec{F} acting on an object at a distance r from the rotation axis is

$$\tau = rF \sin \phi = Fd \quad (10.14)$$

where ϕ is the angle between the position vector of the point of application of the force and the force vector, and d is the moment arm of the force, which is the perpendicular distance from the rotation axis to the line of action of the force.

The **moment of inertia of a system of particles** is defined as

$$I \equiv \sum_i m_i r_i^2 \quad (10.19)$$

where m_i is the mass of the i th particle and r_i is its distance from the rotation axis.

Concepts and Principles

When a rigid object rotates about a fixed axis, the angular position, angular speed, and angular acceleration are related to the translational position, translational speed, and translational acceleration through the relationships

$$s = r\theta \quad (10.1a)$$

$$v = r\omega \quad (10.10)$$

$$a_t = r\alpha \quad (10.11)$$

If a rigid object rotates about a fixed axis with angular speed ω , its **rotational kinetic energy** can be written

$$K_R = \frac{1}{2}I\omega^2 \quad (10.24)$$

where I is the moment of inertia of the object about the axis of rotation.

The **moment of inertia of a rigid object** is

$$I = \int r^2 dm \quad (10.20)$$

where r is the distance from the mass element dm to the axis of rotation.

continued

The rate at which work is done by an external force in rotating a rigid object about a fixed axis, or the **power** delivered, is

$$P = \tau\omega \quad (10.26)$$

If work is done on a rigid object and the only result of the work is rotation about a fixed axis, the net work done by external forces in rotating the object equals the change in the rotational kinetic energy of the object:

$$W = \frac{1}{2}I\omega_f^2 - \frac{1}{2}I\omega_i^2 \quad (10.27)$$

The **total kinetic energy** of a rigid object rolling on a rough surface without slipping equals the rotational kinetic energy about its center of mass plus the translational kinetic energy of the center of mass:

$$K = \frac{1}{2}I_{\text{CM}}\omega^2 + \frac{1}{2}Mv_{\text{CM}}^2 \quad (10.31)$$

Analysis Models for Problem Solving

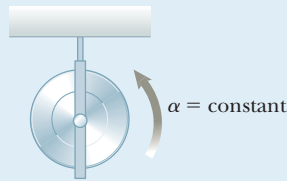
Rigid Object Under Constant Angular Acceleration. If a rigid object rotates about a fixed axis under constant angular acceleration, one can apply equations of kinematics that are analogous to those for translational motion of a particle under constant acceleration:

$$\omega_f = \omega_i + \alpha t \quad (10.6)$$

$$\theta_f = \theta_i + \omega_i t + \frac{1}{2}\alpha t^2 \quad (10.7)$$

$$\omega_f^2 = \omega_i^2 + 2\alpha(\theta_f - \theta_i) \quad (10.8)$$

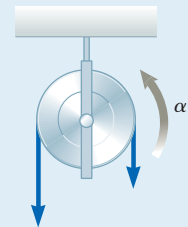
$$\theta_f = \theta_i + \frac{1}{2}(\omega_i + \omega_f)t \quad (10.9)$$



Rigid Object Under a Net Torque. If a rigid object free to rotate about a fixed axis has a net external torque acting on it, the object undergoes an angular acceleration α , where

$$\sum \tau_{\text{ext}} = I\alpha \quad (10.18)$$

This equation is the rotational analog to Newton's second law in the particle under a net force model.



Objective Questions

1. denotes answer available in *Student Solutions Manual/Study Guide*

- A cyclist rides a bicycle with a wheel radius of 0.500 m across campus. A piece of plastic on the front rim makes a clicking sound every time it passes through the fork. If the cyclist counts 320 clicks between her apartment and the cafeteria, how far has she traveled? (a) 0.50 km (b) 0.80 km (c) 1.0 km (d) 1.5 km (e) 1.8 km
- Consider an object on a rotating disk a distance r from its center, held in place on the disk by static friction. Which of the following statements is *not* true concerning this object? (a) If the angular speed is constant, the object must have constant tangential speed. (b) If the angular speed is constant, the object is not accelerated. (c) The object has a tangential acceleration only if the disk has an angular acceleration. (d) If the disk has an angular acceleration, the object has both a centripetal acceleration and a tangential acceleration. (e) The object always has a centripetal acceleration except when the angular speed is zero.
- A wheel is rotating about a fixed axis with constant angular acceleration 3 rad/s^2 . At different moments, its angular speed is -2 rad/s , 0 , and $+2 \text{ rad/s}$. For a point on the rim of the wheel, consider at these moments the magnitude of the tangential component of acceleration and the magnitude of the radial component of acceleration. Rank the following five items from largest to smallest: (a) $|a_t|$ when $\omega = -2 \text{ rad/s}$, (b) $|a_t|$ when $\omega = -2 \text{ rad/s}$, (c) $|a_r|$ when $\omega = 0$, (d) $|a_r|$ when $\omega = 2 \text{ rad/s}$, and (e) $|a_r|$ when $\omega = 2 \text{ rad/s}$. If two items are equal, show them as equal in your ranking. If a quantity is equal to zero, show that fact in your ranking.
- A grindstone increases in angular speed from 4.00 rad/s to 12.00 rad/s in 4.00 s . Through what angle does it turn during that time interval if the angular acceleration is constant? (a) 8.00 rad (b) 12.0 rad (c) 16.0 rad (d) 32.0 rad (e) 64.0 rad
- Suppose a car's standard tires are replaced with tires 1.30 times larger in diameter. (i) Will the car's speedometer reading be (a) 1.69 times too high, (b) 1.30 times too high, (c) accurate, (d) 1.30 times too low, (e) 1.69 times too low, or (f) inaccurate by an unpredictable factor? (ii) Will the car's fuel economy in miles per gallon or km/L appear to be (a) 1.69 times better, (b) 1.30 times better, (c) essentially the same, (d) 1.30 times worse, or (e) 1.69 times worse?
- Figure OQ10.6 shows a system of four particles joined by light, rigid rods. Assume $a = b$ and M is larger than m . About which of the coordinate axes does the system have (i) the smallest and (ii) the largest moment of inertia? (a) the x axis (b) the y axis (c) the z axis. (d) The moment of inertia has the same small value for two axes. (e) The moment of inertia is the same for all three axes.

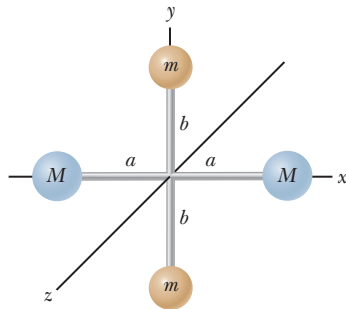


Figure OQ10.6

7. As shown in Figure OQ10.7, a cord is wrapped onto a cylindrical reel mounted on a fixed, frictionless, horizontal axle. When does the reel have a greater magnitude of angular acceleration? (a) When the cord is pulled down with a constant force of 50 N. (b) When an object of weight 50 N is hung from the cord and released. (c) The angular accelerations in parts (a) and (b) are equal. (d) It is impossible to determine.

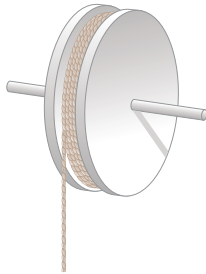


Figure OQ10.7 Objective Question 7 and Conceptual Question 4.

8. A constant net torque is exerted on an object. Which of the following quantities for the object cannot be constant? Choose all that apply. (a) angular position (b) angular velocity (c) angular acceleration (d) moment of inertia (e) kinetic energy
9. A basketball rolls across a classroom floor without slipping, with its center of mass moving at a certain speed. A block of ice of the same mass is set sliding across the floor with the same speed along a parallel line. Which object has more (i) kinetic energy and (ii) momentum? (a) The basketball does. (b) The ice does. (c) The two quantities are equal. (iii) The two objects encounter a ramp sloping upward. Which object will travel farther up the ramp? (a) The basketball will. (b) The ice will. (c) They will travel equally far up the ramp.
10. A toy airplane hangs from the ceiling at the bottom end of a string. You turn the airplane many times to wind up the string clockwise and release it. The airplane starts to spin counterclockwise, slowly at first and then faster and faster. Take counterclockwise as the positive sense and assume friction is negligible. When the string is entirely unwound, the airplane has its maximum rate of rotation. (i) At this moment, is its angular acceleration (a) positive, (b) negative, or (c) zero? (ii) The airplane continues to spin, winding the string counterclockwise as it slows down. At the moment it momentarily stops, is its angular acceleration (a) positive, (b) negative, or (c) zero?
11. A solid aluminum sphere of radius R has moment of inertia I about an axis through its center. Will the moment of inertia about a central axis of a solid aluminum sphere of radius $2R$ be (a) $2I$, (b) $4I$, (c) $8I$, (d) $16I$, or (e) $32I$?

Conceptual Questions

I. denotes answer available in *Student Solutions Manual/Study Guide*

- Is it possible to change the translational kinetic energy of an object without changing its rotational energy?
- Must an object be rotating to have a nonzero moment of inertia?
- Suppose just two external forces act on a stationary, rigid object and the two forces are equal in magnitude and opposite in direction. Under what condition does the object start to rotate?
- Explain how you might use the apparatus described in Figure OQ10.7 to determine the moment of inertia of the wheel. *Note:* If the wheel does not have a uniform mass density, the moment of inertia is not necessarily equal to $\frac{1}{2}MR^2$.
- Using the results from Example 10.6, how would you calculate the angular speed of the wheel and the linear speed of the hanging object at $t = 2$ s, assuming the system is released from rest at $t = 0$?
- Explain why changing the axis of rotation of an object changes its moment of inertia.
- Suppose you have two eggs, one hard-boiled and the other uncooked. You wish to determine which is the hard-boiled egg without breaking the eggs, which can be done by spinning the two eggs on the floor and comparing the rotational motions. (a) Which egg spins faster? (b) Which egg rotates more uniformly? (c) Which egg begins spinning again after being stopped and then immediately released? Explain your answers to parts (a), (b), and (c).
- Suppose you set your textbook sliding across a gymnasium floor with a certain initial speed. It quickly stops moving because of a friction force exerted on it by the floor. Next, you start a basketball rolling with the same initial speed. It keeps rolling from one end of the gym to the other. (a) Why does the basketball roll so far? (b) Does friction significantly affect the basketball's motion?
- (a) What is the angular speed of the second hand of an analog clock? (b) What is the direction of $\vec{\omega}$ as you view a clock hanging on a vertical wall? (c) What is the magnitude of the angular acceleration vector $\vec{\alpha}$ of the second hand?
- One blade of a pair of scissors rotates counterclockwise in the xy plane. (a) What is the direction of $\vec{\omega}$ for the blade? (b) What is the direction of $\vec{\alpha}$ if the magnitude of the angular velocity is decreasing in time?

11. If you see an object rotating, is there necessarily a net torque acting on it?
12. If a small sphere of mass M were placed at the end of the rod in Figure 10.21, would the result for ω be greater than, less than, or equal to the value obtained in Example 10.11?
13. Three objects of uniform density—a solid sphere, a solid cylinder, and a hollow cylinder—are placed at the top of an incline (Fig. CQ10.13). They are all released from rest at the same elevation and roll without slipping. (a) Which object reaches the bottom first? (b) Which reaches it last? *Note:* The result is independent of the masses and the radii of the objects. (Try this activity at home!)

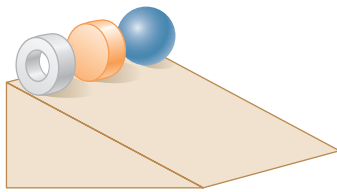


Figure CQ10.13

14. Which of the entries in Table 10.2 applies to finding the moment of inertia (a) of a long, straight sewer pipe rotating about its axis of symmetry? (b) Of an embroidery hoop rotating about an axis through its center and perpendicular to its plane? (c) Of a uniform door turning on its hinges? (d) Of a coin turning about an axis through its center and perpendicular to its faces?
15. Figure CQ10.15 shows a side view of a child's tricycle with rubber tires on a horizontal concrete sidewalk. If a string were attached to the upper pedal on the

far side and pulled forward horizontally, the tricycle would start to roll forward. (a) Instead, assume a string is attached to the lower pedal on the near side and pulled forward horizontally as shown by A. Will the tricycle start to roll? If so, which way? Answer the same questions if (b) the string is pulled forward and upward as shown by B, (c) if the string is pulled straight down as shown by C, and (d) if the string is pulled forward and downward as shown by D. (e) **What If?** Suppose the string is instead attached to the rim of the front wheel and pulled upward and backward as shown by E. Which way does the tricycle roll? (f) Explain a pattern of reasoning, based on the figure, that makes it easy to answer questions such as these. What physical quantity must you evaluate?

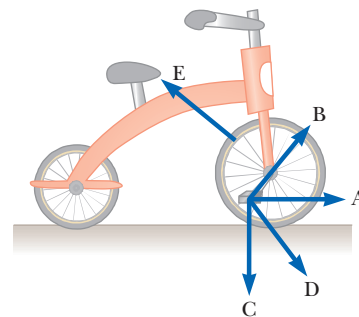


Figure CQ10.15

16. A person balances a meterstick in a horizontal position on the extended index fingers of her right and left hands. She slowly brings the two fingers together. The stick remains balanced, and the two fingers always meet at the 50-cm mark regardless of their original positions. (Try it!) Explain why that occurs.

Problems



The problems found in this chapter may be assigned online in Enhanced WebAssign

1. straightforward; 2. intermediate; 3. challenging

1. full solution available in the *Student Solutions Manual/Study Guide*

AMT Analysis Model tutorial available in Enhanced WebAssign

GP Guided Problem

M Master It tutorial available in Enhanced WebAssign

W Watch It video solution available in Enhanced WebAssign

Section 10.1 Angular Position, Velocity, and Acceleration

- (a) Find the angular speed of the Earth's rotation about its axis. (b) How does this rotation affect the shape of the Earth?
- A potter's wheel moves uniformly from rest to an angular speed of 1.00 rev/s in 30.0 s. (a) Find its average angular acceleration in radians per second per second. (b) Would doubling the angular acceleration during the given period have doubled the final angular speed?
- During a certain time interval, the angular position **W** of a swinging door is described by $\theta = 5.00 + 10.0t + 2.00t^2$, where θ is in radians and t is in seconds. Deter-

mine the angular position, angular speed, and angular acceleration of the door (a) at $t = 0$ and (b) at $t = 3.00$ s.

- A bar on a hinge starts from rest and rotates with an angular acceleration $\alpha = 10 + 6t$, where α is in rad/s^2 and t is in seconds. Determine the angle in radians through which the bar turns in the first 4.00 s.

Section 10.2 Analysis Model: Rigid Object Under Constant Angular Acceleration

- W** A wheel starts from rest and rotates with constant angular acceleration to reach an angular speed of 12.0 rad/s in 3.00 s. Find (a) the magnitude of the angu-

- lar acceleration of the wheel and (b) the angle in radians through which it rotates in this time interval.
- A centrifuge in a medical laboratory rotates at an angular speed of 3 600 rev/min. When switched off, it rotates through 50.0 revolutions before coming to rest. Find the constant angular acceleration of the centrifuge.
 - An electric motor rotating a workshop grinding wheel at 1.00×10^2 rev/min is switched off. Assume the wheel has a constant negative angular acceleration of magnitude 2.00 rad/s^2 . (a) How long does it take the grinding wheel to stop? (b) Through how many radians has the wheel turned during the time interval found in part (a)?
 - A machine part rotates at an angular speed of 0.060 rad/s ; its speed is then increased to 2.2 rad/s at an angular acceleration of 0.70 rad/s^2 . (a) Find the angle through which the part rotates before reaching this final speed. (b) If both the initial and final angular speeds are doubled and the angular acceleration remains the same, by what factor is the angular displacement changed? Why?
 - A dentist's drill starts from rest. After 3.20 s of constant angular acceleration, it turns at a rate of 2.51×10^4 rev/min. (a) Find the drill's angular acceleration. (b) Determine the angle (in radians) through which the drill rotates during this period.
 - Why is the following situation impossible? Starting from rest, a disk rotates around a fixed axis through an angle of 50.0 rad in a time interval of 10.0 s. The angular acceleration of the disk is constant during the entire motion, and its final angular speed is 8.00 rad/s .
 - A rotating wheel requires 3.00 s to rotate through 37.0 revolutions. Its angular speed at the end of the 3.00-s interval is 98.0 rad/s . What is the constant angular acceleration of the wheel?
 - The tub of a washer goes into its spin cycle, starting from rest and gaining angular speed steadily for 8.00 s, at which time it is turning at 5.00 rev/s . At this point, the person doing the laundry opens the lid, and a safety switch turns off the washer. The tub smoothly slows to rest in 12.0 s. Through how many revolutions does the tub turn while it is in motion?
 - A spinning wheel is slowed down by a brake, giving it a constant angular acceleration of -5.60 rad/s^2 . During a 4.20-s time interval, the wheel rotates through 62.4 rad. What is the angular speed of the wheel at the end of the 4.20-s interval?
 - Review.** Consider a tall building located on the Earth's equator. As the Earth rotates, a person on the top floor of the building moves faster than someone on the ground with respect to an inertial reference frame because the person on the ground is closer to the Earth's axis. Consequently, if an object is dropped from the top floor to the ground a distance h below, it lands east of the point vertically below where it was dropped. (a) How far to the east will the object land? Express your answer in terms of h , g , and the angular speed ω of the Earth. Ignore air resistance and assume the free-fall acceleration is constant over this range of heights. (b) Evaluate the eastward displacement for $h = 50.0 \text{ m}$. (c) In your judgment,

were we justified in ignoring this aspect of the *Coriolis effect* in our previous study of free fall? (d) Suppose the angular speed of the Earth were to decrease due to tidal friction with constant angular acceleration. Would the eastward displacement of the dropped object increase or decrease compared with that in part (b)?

Section 10.3 Angular and Translational Quantities

- A racing car travels on a circular track of radius 250 m. Assuming the car moves with a constant speed of 45.0 m/s , find (a) its angular speed and (b) the magnitude and direction of its acceleration.
- Make an order-of-magnitude estimate of the number of revolutions through which a typical automobile tire turns in one year. State the quantities you measure or estimate and their values.
- A discus thrower (Fig. P4.33, page 104) accelerates a discus from rest to a speed of 25.0 m/s by whirling it through 1.25 rev. Assume the discus moves on the arc of a circle 1.00 m in radius. (a) Calculate the final angular speed of the discus. (b) Determine the magnitude of the angular acceleration of the discus, assuming it to be constant. (c) Calculate the time interval required for the discus to accelerate from rest to 25.0 m/s .
- Figure P10.18 shows the drive train of a bicycle that has wheels 67.3 cm in diameter and pedal cranks 17.5 cm long. The cyclist pedals at a steady cadence of 76.0 rev/min. The chain engages with a front sprocket 15.2 cm in diameter and a rear sprocket 7.00 cm in diameter. Calculate (a) the speed of a link of the chain relative to the bicycle frame, (b) the angular speed of the bicycle wheels, and (c) the speed of the bicycle relative to the road. (d) What pieces of data, if any, are not necessary for the calculations?

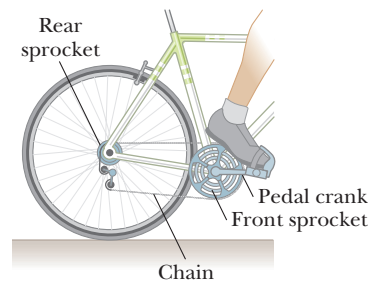


Figure P10.18

- A wheel 2.00 m in diameter lies in a vertical plane and rotates about its central axis with a constant angular acceleration of 4.00 rad/s^2 . The wheel starts at rest at $t = 0$, and the radius vector of a certain point P on the rim makes an angle of 57.3° with the horizontal at this time. At $t = 2.00 \text{ s}$, find (a) the angular speed of the wheel and, for point P , (b) the tangential speed, (c) the total acceleration, and (d) the angular position.
- A car accelerates uniformly from rest and reaches a speed of 22.0 m/s in 9.00 s. Assuming the diameter of a tire is 58.0 cm, (a) find the number of revolutions the tire makes during this motion, assuming that no slipping occurs. (b) What is the final angular speed of a tire in revolutions per second?

21. A disk 8.00 cm in radius rotates at a constant rate of **M** 1 200 rev/min about its central axis. Determine (a) its angular speed in radians per second, (b) the tangential speed at a point 3.00 cm from its center, (c) the radial acceleration of a point on the rim, and (d) the total distance a point on the rim moves in 2.00 s.

22. A straight ladder is leaning against the wall of a house. The ladder has rails 4.90 m long, joined by rungs 0.410 m long. Its bottom end is on solid but sloping ground so that the top of the ladder is 0.690 m to the left of where it should be, and the ladder is unsafe to climb. You want to put a flat rock under one foot of the ladder to compensate for the slope of the ground. (a) What should be the thickness of the rock? (b) Does using ideas from this chapter make it easier to explain the solution to part (a)? Explain your answer.

23. A car traveling on a flat (unbanked), circular track **W** accelerates uniformly from rest with a tangential acceleration of 1.70 m/s^2 . The car makes it one-quarter of the way around the circle before it skids off the track. From these data, determine the coefficient of static friction between the car and the track.

24. A car traveling on a flat (unbanked), circular track accelerates uniformly from rest with a tangential acceleration of a . The car makes it one-quarter of the way around the circle before it skids off the track. From these data, determine the coefficient of static friction between the car and the track.

25. In a manufacturing process, a large, cylindrical roller is used to flatten material fed beneath it. The diameter of the roller is 1.00 m, and, while being driven into rotation around a fixed axis, its angular position is expressed as

$$\theta = 2.50t^2 - 0.600t^3$$

where θ is in radians and t is in seconds. (a) Find the maximum angular speed of the roller. (b) What is the maximum tangential speed of a point on the rim of the roller? (c) At what time t should the driving force be removed from the roller so that the roller does not reverse its direction of rotation? (d) Through how many rotations has the roller turned between $t = 0$ and the time found in part (c)?

26. Review. A small object with mass 4.00 kg moves counterclockwise with constant angular speed 1.50 rad/s in a circle of radius 3.00 m centered at the origin. It starts at the point with position vector $3.00 \hat{i} \text{ m}$. It then undergoes an angular displacement of 9.00 rad. (a) What is its new position vector? Use unit-vector notation for all vector answers. (b) In what quadrant is the particle located, and what angle does its position vector make with the positive x axis? (c) What is its velocity? (d) In what direction is it moving? (e) What is its acceleration? (f) Make a sketch of its position, velocity, and acceleration vectors. (g) What total force is exerted on the object?

Section 10.4 Torque

27. Find the net torque on the wheel in Figure P10.27 about **M** the axle through O , taking $a = 10.0 \text{ cm}$ and $b = 25.0 \text{ cm}$.

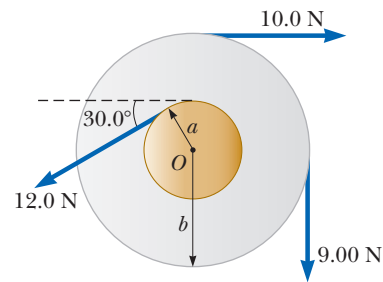


Figure P10.27

28. The fishing pole in Figure P10.28 makes an angle of **W** 20.0° with the horizontal. What is the torque exerted by the fish about an axis perpendicular to the page and passing through the angler's hand if the fish pulls on the fishing line with a force $\vec{F} = 100 \text{ N}$ at an angle 37.0° below the horizontal? The force is applied at a point 2.00 m from the angler's hands.

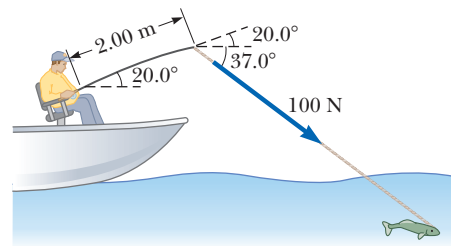


Figure P10.28

Section 10.5 Analysis Model: Rigid Object Under a Net Torque

29. An electric motor turns a flywheel through a drive belt that joins a pulley on the motor and a pulley that is rigidly attached to the flywheel as shown in Figure P10.29. The flywheel is a solid disk with a mass of 80.0 kg and a radius $R = 0.625 \text{ m}$. It turns on a frictionless axle. Its pulley has much smaller mass and a radius of $r = 0.230 \text{ m}$. The tension T_u in the upper (taut) segment of the belt is 135 N, and the flywheel has a clockwise angular acceleration of 1.67 rad/s^2 . Find the tension in the lower (slack) segment of the belt.

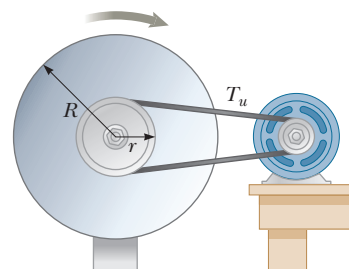


Figure P10.29

30. A grinding wheel is in the form of a uniform solid disk **AMT** of radius 7.00 cm and mass 2.00 kg. It starts from rest and accelerates uniformly under the action of the constant torque of $0.600 \text{ N} \cdot \text{m}$ that the motor exerts on the wheel. (a) How long does the wheel take to reach its final operating speed of 1 200 rev/min? (b) Through **W** how many revolutions does it turn while accelerating?

31. A 150-kg merry-go-round in the shape of a uniform, solid, horizontal disk of radius 1.50 m is set in motion by wrapping a rope about the rim of the disk and pulling on the rope. What constant force must be exerted on the rope to bring the merry-go-round from rest to an angular speed of 0.500 rev/s in 2.00 s?

32. Review. A block of mass $m_1 = 2.00$ kg and a block of mass $m_2 = 6.00$ kg are connected by a massless string over a pulley in the shape of a solid disk having radius $R = 0.250$ m and mass $M = 10.0$ kg. The fixed, wedge-shaped ramp makes an angle of $\theta = 30.0^\circ$ as shown in Figure P10.32. The coefficient of kinetic friction is 0.360 for both blocks. (a) Draw force diagrams of both blocks and of the pulley. Determine (b) the acceleration of the two blocks and (c) the tensions in the string on both sides of the pulley.

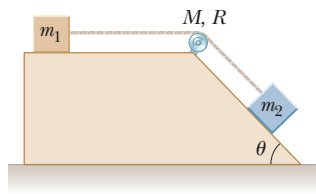


Figure P10.32

33. A model airplane with mass 0.750 kg is tethered to the ground by a wire so that it flies in a horizontal circle 30.0 m in radius. The airplane engine provides a net thrust of 0.800 N perpendicular to the tethering wire. (a) Find the torque the net thrust produces about the center of the circle. (b) Find the angular acceleration of the airplane. (c) Find the translational acceleration of the airplane tangent to its flight path.

34. A disk having moment of inertia $100 \text{ kg} \cdot \text{m}^2$ is free to rotate without friction, starting from rest, about a fixed axis through its center. A tangential force whose magnitude can range from $F = 0$ to $F = 50.0$ N can be applied at any distance ranging from $R = 0$ to $R = 3.00$ m from the axis of rotation. (a) Find a pair of values of F and R that cause the disk to complete 2.00 rev in 10.0 s. (b) Is your answer for part (a) a unique answer? How many answers exist?

35. The combination of an applied force and a friction force produces a constant total torque of $36.0 \text{ N} \cdot \text{m}$ on a wheel rotating about a fixed axis. The applied force acts for 6.00 s. During this time, the angular speed of the wheel increases from 0 to 10.0 rad/s . The applied force is then removed, and the wheel comes to rest in 60.0 s. Find (a) the moment of inertia of the wheel, (b) the magnitude of the torque due to friction, and (c) the total number of revolutions of the wheel during the entire interval of 66.0 s.

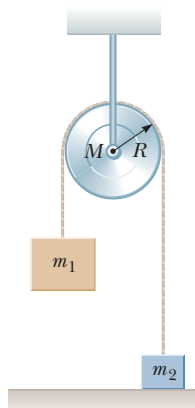


Figure P10.36

Object m_2 is resting on the floor, and object m_1 is 4.00 m above the floor when it is released from rest. The pulley axis is frictionless. The cord is light, does not stretch, and does not slip on the pulley. (a) Calculate the time interval required for m_1 to hit the floor. (b) How would your answer change if the pulley were massless?

37. A potter's wheel—a thick stone disk of radius 0.500 m and mass 100 kg—is freely rotating at 50.0 rev/min. The potter can stop the wheel in 6.00 s by pressing a wet rag against the rim and exerting a radially inward force of 70.0 N. Find the effective coefficient of kinetic friction between wheel and rag.

Section 10.6 Calculation of Moments of Inertia

38. Imagine that you stand tall and turn about a vertical axis through the top of your head and the point halfway between your ankles. Compute an order-of-magnitude estimate for the moment of inertia of your body for this rotation. In your solution, state the quantities you measure or estimate and their values.

39. A uniform, thin, solid door has height 2.20 m, width 0.870 m, and mass 23.0 kg. (a) Find its moment of inertia for rotation on its hinges. (b) Is any piece of data unnecessary?

40. Two balls with masses M and m are connected by a rigid rod of length L and negligible mass as shown in Figure P10.40. For an axis perpendicular to the rod, (a) show that the system has the minimum moment of inertia when the axis passes through the center of mass. (b) Show that this moment of inertia is $I = \mu L^2$, where $\mu = mM/(m + M)$.

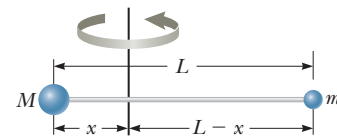


Figure P10.40

41. Figure P10.41 shows a side view of a car tire before it is mounted on a wheel. Model it as having two sidewalls of uniform thickness 0.635 cm and a tread wall of uniform thickness 2.50 cm and width 20.0 cm. Assume the rubber has uniform density $1.10 \times 10^3 \text{ kg/m}^3$. Find its moment of inertia about an axis perpendicular to the page through its center.

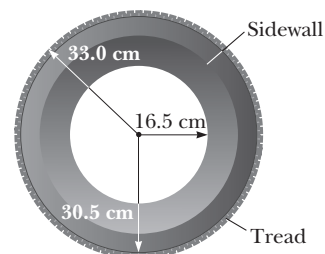


Figure P10.41

42. Following the procedure used in Example 10.7, prove that the moment of inertia about the y axis of the rigid rod in Figure 10.15 is $\frac{1}{3}ML^2$.

43. Three identical thin rods, each of length L and mass m , are welded perpendicular to one another as shown in Figure P10.43. The assembly is rotated about an axis that passes through the end of one rod and is parallel to another. Determine the moment of inertia of this structure about this axis.

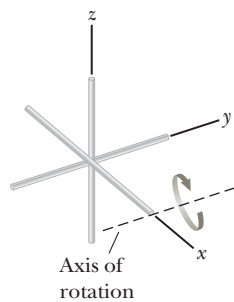


Figure P10.43

Section 10.7 Rotational Kinetic Energy

44. Rigid rods of negligible mass lying along the y axis connect three particles (Fig. P10.44). The system rotates about the x axis with an angular speed of 2.00 rad/s. Find (a) the moment of inertia about the x axis, (b) the total rotational kinetic energy evaluated from $\frac{1}{2}I\omega^2$, (c) the tangential speed of each particle, and (d) the total kinetic energy evaluated from $\sum \frac{1}{2}m_i v_i^2$. (e) Compare the answers for kinetic energy in parts (a) and (b).

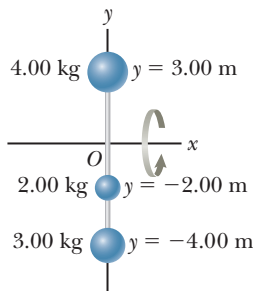


Figure P10.44

45. The four particles in Figure P10.45 are connected by rigid rods of negligible mass. The origin is at the center of the rectangle. The system rotates in the xy plane about the z axis with an angular speed of 6.00 rad/s. Calculate (a) the moment of inertia of the system about the z axis and (b) the rotational kinetic energy of the system.

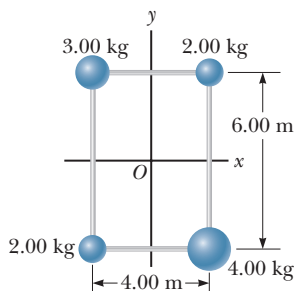


Figure P10.45

46. Many machines employ cams for various purposes, such as opening and closing valves. In Figure P10.46, the cam is a circular disk of radius R with a hole of diameter R cut through it. As shown in the figure, the

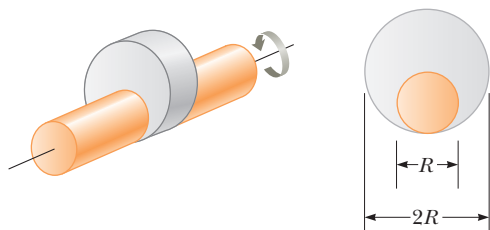


Figure P10.46

hole does not pass through the center of the disk. The cam with the hole cut out has mass M . The cam is mounted on a uniform, solid, cylindrical shaft of diameter R and also of mass M . What is the kinetic energy of the cam–shaft combination when it is rotating with angular speed ω about the shaft's axis?

47. A *war-wolf* or *trebuchet* is a device used during the Middle Ages to throw rocks at castles and now sometimes used to fling large vegetables and pianos as a sport. A simple trebuchet is shown in Figure P10.47. Model it as a stiff rod of negligible mass, 3.00 m long, joining particles of mass $m_1 = 0.120$ kg and $m_2 = 60.0$ kg at its ends. It can turn on a frictionless, horizontal axle perpendicular to the rod and 14.0 cm from the large-mass particle. The operator releases the trebuchet from rest in a horizontal orientation. (a) Find the maximum speed that the small-mass object attains. (b) While the small-mass object is gaining speed, does it move with constant acceleration? (c) Does it move with constant tangential acceleration? (d) Does the trebuchet move with constant angular acceleration? (e) Does it have constant momentum? (f) Does the trebuchet–Earth system have constant mechanical energy?

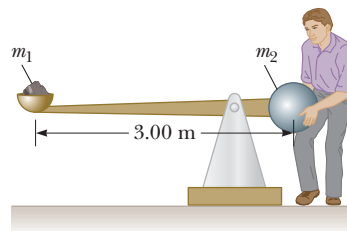


Figure P10.47

Section 10.8 Energy Considerations in Rotational Motion

48. A horizontal 800 -N merry-go-round is a solid disk of radius 1.50 m and is started from rest by a constant horizontal force of 50.0 N applied tangentially to the edge of the disk. Find the kinetic energy of the disk after 3.00 s.
49. Big Ben, the nickname for the clock in Elizabeth Tower (named after the Queen in 2012) in London, has an hour hand 2.70 m long with a mass of 60.0 kg and a minute hand 4.50 m long with a mass of 100 kg (Fig. P10.49). Calculate the total rotational kinetic energy of the two hands about the axis of rotation. (You may



Figure P10.49 Problems 49 and 72.

model the hands as long, thin rods rotated about one end. Assume the hour and minute hands are rotating at a constant rate of one revolution per 12 hours and 60 minutes, respectively.)

50. Consider two objects with $m_1 > m_2$ connected by a light string that passes over a pulley having a moment of inertia of I about its axis of rotation as shown in Figure P10.50. The string does not slip on the pulley or stretch. The pulley turns without friction. The two objects are released from rest separated by a vertical distance $2h$. (a) Use the principle of conservation of energy to find the translational speeds of the objects as they pass each other. (b) Find the angular speed of the pulley at this time.

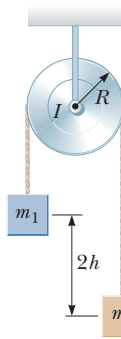


Figure P10.50

51. The top in Figure P10.51 has a moment of inertia of $4.00 \times 10^{-4} \text{ kg} \cdot \text{m}^2$ and is initially at rest. It is free to rotate about the stationary axis AA' . A string, wrapped around a peg along the axis of the top, is pulled in such a manner as to maintain a constant tension of 5.57 N . If the string does not slip while it is unwound from the peg, what is the angular speed of the top after 80.0 cm of string has been pulled off the peg?

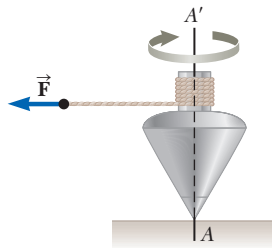


Figure P10.51

52. Why is the following situation impossible? In a large city with an air-pollution problem, a bus has no combustion engine. It runs over its citywide route on energy drawn from a large, rapidly rotating flywheel under the floor of the bus. The flywheel is spun up to its maximum rotation rate of $3\,000 \text{ rev/min}$ by an electric motor at the bus terminal. Every time the bus speeds up, the flywheel slows down slightly. The bus is equipped with regenerative braking so that the flywheel can speed up when the bus slows down. The flywheel is a uniform solid cylinder with mass $1\,200 \text{ kg}$ and radius 0.500 m . The bus body does work against air resistance and rolling resistance at the average rate of 25.0 hp as it travels its route with an average speed of 35.0 km/h .
53. In Figure P10.53, the hanging object has a mass of $m_1 = 0.420 \text{ kg}$; the sliding block has a mass of $m_2 = 0.850 \text{ kg}$;

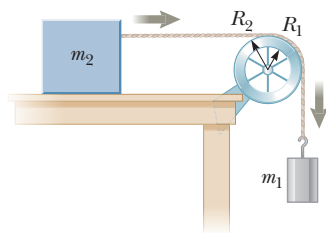


Figure P10.53

and the pulley is a hollow cylinder with a mass of $M = 0.350 \text{ kg}$, an inner radius of $R_1 = 0.0200 \text{ m}$, and an outer radius of $R_2 = 0.0300 \text{ m}$. Assume the mass of the spokes is negligible. The coefficient of kinetic friction between the block and the horizontal surface is $\mu_k = 0.250$. The pulley turns without friction on its axle. The light cord does not stretch and does not slip on the pulley. The block has a velocity of $v_i = 0.820 \text{ m/s}$ toward the pulley when it passes a reference point on the table. (a) Use energy methods to predict its speed after it has moved to a second point, 0.700 m away. (b) Find the angular speed of the pulley at the same moment.

54. **Review.** A thin, cylindrical rod $\ell = 24.0 \text{ cm}$ long with mass $m = 1.20 \text{ kg}$ has a ball of diameter $d = 8.00 \text{ cm}$ and mass $M = 2.00 \text{ kg}$ attached to one end. The arrangement is originally vertical and stationary, with the ball at the top as shown in Figure P10.54. The combination is free to pivot about the bottom end of the rod after being given a slight nudge.

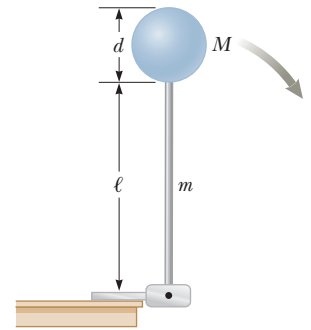


Figure P10.54

(a) After the combination rotates through 90 degrees, what is its rotational kinetic energy? (b) What is the angular speed of the rod and ball? (c) What is the linear speed of the center of mass of the ball? (d) How does it compare with the speed had the ball fallen freely through the same distance of 28 cm ?

55. **Review.** An object with a mass of $m = 5.10 \text{ kg}$ is attached to the free end of a light string wrapped around a reel of radius $R = 0.250 \text{ m}$ and mass $M = 3.00 \text{ kg}$. The reel is a solid disk, free to rotate in a vertical plane about the horizontal axis passing through its center as shown in Figure P10.55. The suspended object is released from rest 6.00 m above the floor. Determine (a) the tension in the string, (b) the acceleration of the object, and (c) the speed with which the object hits the floor. (d) Verify your answer to part (c) by using the isolated system (energy) model.

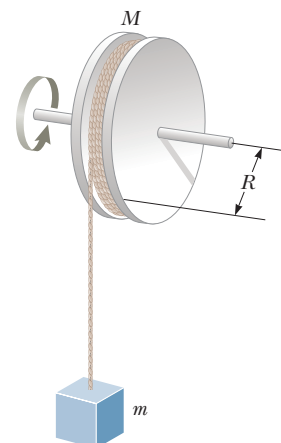


Figure P10.55

- 56.** This problem describes one experimental method for determining the moment of inertia of an irregularly shaped object such as the payload for a satellite. Figure P10.56 shows a counterweight of mass m suspended by a cord wound around a spool of radius r , forming part of a turntable supporting the object. The turntable can rotate without friction. When the counterweight is released from rest, it descends through a distance h , acquiring a speed v . Show that the moment of inertia I of the rotating apparatus (including the turntable) is $mr^2(2gh/v^2 - 1)$.

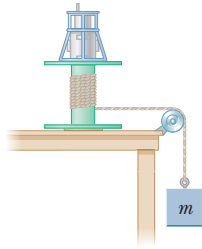


Figure P10.56

- 57.** A uniform solid disk of radius R and mass M is free to rotate on a frictionless pivot through a point on its rim (Fig. P10.57). If the disk is released from rest in the position shown by the copper-colored circle, (a) what is the speed of its center of mass when the disk reaches the position indicated by the dashed circle? (b) What is the speed of the lowest point on the disk in the dashed position? (c) **What If?** Repeat part (a) using a uniform hoop.

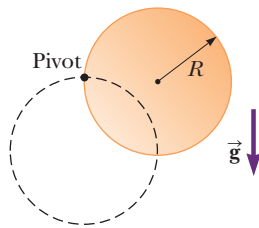


Figure P10.57

- 58.** The head of a grass string trimmer has 100 g of cord wound in a light, cylindrical spool with inside diameter 3.00 cm and outside diameter 18.0 cm as shown in Figure P10.58. The cord has a linear density of 10.0 g/m. A single strand of the cord extends 16.0 cm from the outer edge of the spool. (a) When switched on, the trimmer speeds up from 0 to 2 500 rev/min in 0.215 s. What average power is delivered to the head by the trimmer motor while it is accelerating? (b) When the trimmer is cutting grass, it spins at 2 000 rev/min and the grass exerts an average tangential force of 7.65 N on the outer end of the cord, which is still at a radial distance of 16.0 cm from the outer edge of the spool. What is the power delivered to the head under load?

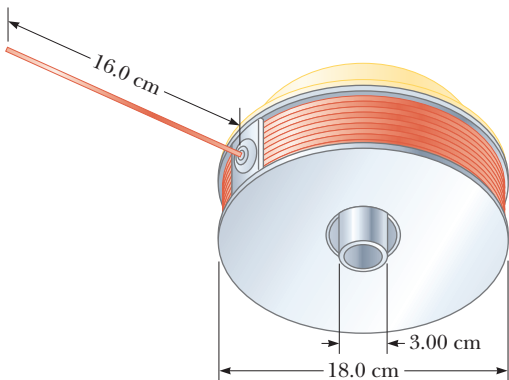


Figure P10.58

Section 10.9 Rolling Motion of a Rigid Object

- 59.** A cylinder of mass 10.0 kg rolls without slipping on a horizontal surface. At a certain instant, its center of mass has a speed of 10.0 m/s. Determine (a) the translational kinetic energy of its center of mass, (b) the rotational kinetic energy about its center of mass, and (c) its total energy.
- 60.** A solid sphere is released from height h from the top of an incline making an angle θ with the horizontal. Calculate the speed of the sphere when it reaches the bottom of the incline (a) in the case that it rolls without slipping and (b) in the case that it slides frictionlessly without rolling. (c) Compare the time intervals required to reach the bottom in cases (a) and (b).
- 61.** (a) Determine the acceleration of the center of mass of a uniform solid disk rolling down an incline making angle θ with the horizontal. (b) Compare the acceleration found in part (a) with that of a uniform hoop. (c) What is the minimum coefficient of friction required to maintain pure rolling motion for the disk?
- 62.** A smooth cube of mass m and edge length r slides with speed v on a horizontal surface with negligible friction. The cube then moves up a smooth incline that makes an angle θ with the horizontal. A cylinder of mass m and radius r rolls without slipping with its center of mass moving with speed v and encounters an incline of the same angle of inclination but with sufficient friction that the cylinder continues to roll without slipping. (a) Which object will go the greater distance up the incline? (b) Find the difference between the maximum distances the objects travel up the incline. (c) Explain what accounts for this difference in distances traveled.
- 63.** A uniform solid disk and a uniform hoop are placed side by side at the top of an incline of height h . (a) If they are released from rest and roll without slipping, which object reaches the bottom first? (b) Verify your answer by calculating their speeds when they reach the bottom in terms of h .
- 64.** A tennis ball is a hollow sphere with a thin wall. It is set rolling without slipping at 4.03 m/s on a horizontal section of a track as shown in Figure P10.64. It rolls around the inside of a vertical circular loop of radius $r = 45.0$ cm. As the ball nears the bottom of the loop, the shape of the track deviates from a perfect circle so that the ball leaves the track at a point $h = 20.0$ cm below the horizontal section. (a) Find the ball's speed at the top of the loop. (b) Demonstrate that the ball will not fall from the track at the top of the loop. (c) Find the ball's speed as it leaves the track at the bottom. (d) **What If?** Suppose that static friction between ball and track were

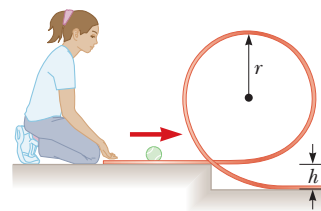


Figure P10.64

negligible so that the ball slid instead of rolling. Would its speed then be higher, lower, or the same at the top of the loop? (e) Explain your answer to part (d).

65. A metal can containing condensed mushroom soup has mass 215 g, height 10.8 cm, and diameter 6.38 cm. It is placed at rest on its side at the top of a 3.00-m-long incline that is at 25.0° to the horizontal and is then released to roll straight down. It reaches the bottom of the incline after 1.50 s. (a) Assuming mechanical energy conservation, calculate the moment of inertia of the can. (b) Which pieces of data, if any, are unnecessary for calculating the solution? (c) Why can't the moment of inertia be calculated from $I = \frac{1}{2}mr^2$ for the cylindrical can?

Additional Problems

66. As shown in Figure 10.13 on page 306, toppling chimneys often break apart in midfall because the mortar between the bricks cannot withstand much shear stress. As the chimney begins to fall, shear forces must act on the topmost sections to accelerate them tangentially so that they can keep up with the rotation of the lower part of the stack. For simplicity, let us model the chimney as a uniform rod of length ℓ pivoted at the lower end. The rod starts at rest in a vertical position (with the frictionless pivot at the bottom) and falls over under the influence of gravity. What fraction of the length of the rod has a tangential acceleration greater than $g \sin \theta$, where θ is the angle the chimney makes with the vertical axis?

67. **Review.** A 4.00-m length of light nylon cord is wound around a uniform cylindrical spool of radius 0.500 m and mass 1.00 kg. The spool is mounted on a frictionless axle and is initially at rest. The cord is pulled from the spool with a constant acceleration of magnitude 2.50 m/s^2 . (a) How much work has been done on the spool when it reaches an angular speed of 8.00 rad/s ? (b) How long does it take the spool to reach this angular speed? (c) How much cord is left on the spool when it reaches this angular speed?

68. An elevator system in a tall building consists of a 800-kg car and a 950-kg counterweight joined by a light cable of constant length that passes over a pulley of mass 280 kg. The pulley, called a sheave, is a solid cylinder of radius 0.700 m turning on a horizontal axle. The cable does not slip on the sheave. A number n of people, each of mass 80.0 kg, are riding in the elevator car, moving upward at 3.00 m/s and approaching the floor where the car should stop. As an energy-conservation measure, a computer disconnects the elevator motor at just the right moment so that the sheave-car-counterweight system then coasts freely without friction and comes to rest at the floor desired. There it is caught by a simple latch rather than by a massive brake. (a) Determine the distance d the car coasts upward as a function of n . Evaluate the distance for (b) $n = 2$, (c) $n = 12$, and (d) $n = 0$. (e) For what integer values of n does the expression in part (a) apply? (f) Explain your answer to part (e). (g) If an infinite number of people could fit on the elevator, what is the value of d ?

69. A shaft is turning at 65.0 rad/s at time $t = 0$. Thereafter, its angular acceleration is given by

$$\alpha = -10.0 - 5.00t$$

where α is in rad/s^2 and t is in seconds. (a) Find the angular speed of the shaft at $t = 3.00 \text{ s}$. (b) Through what angle does it turn between $t = 0$ and $t = 3.00 \text{ s}$?

70. A shaft is turning at angular speed ω at time $t = 0$. Thereafter, its angular acceleration is given by

$$\alpha = A + Bt$$

(a) Find the angular speed of the shaft at time t . (b) Through what angle does it turn between $t = 0$ and t ?

71. **Review.** A mixing beater consists of three thin rods, each 10.0 cm long. The rods diverge from a central hub, separated from each other by 120° , and all turn in the same plane. A ball is attached to the end of each rod. Each ball has cross-sectional area 4.00 cm^2 and is so shaped that it has a drag coefficient of 0.600. Calculate the power input required to spin the beater at $1\,000 \text{ rev/min}$ (a) in air and (b) in water.

72. The hour hand and the minute hand of Big Ben, the Elizabeth Tower clock in London, are 2.70 m and 4.50 m long and have masses of 60.0 kg and 100 kg, respectively (see Fig. P10.49). (a) Determine the total torque due to the weight of these hands about the axis of rotation when the time reads (i) 3:00, (ii) 5:15, (iii) 6:00, (iv) 8:20, and (v) 9:45. (You may model the hands as long, thin, uniform rods.) (b) Determine all times when the total torque about the axis of rotation is zero. Determine the times to the nearest second, solving a transcendental equation numerically.

73. A long, uniform rod of length L and mass M is pivoted about a frictionless, horizontal pin through one end. The rod is nudged from rest in a vertical position as shown in Figure P10.73. At the instant the rod is horizontal, find (a) its angular speed, (b) the magnitude of its angular acceleration, (c) the x and y components of the acceleration of its center of mass, and (d) the components of the reaction force at the pivot.

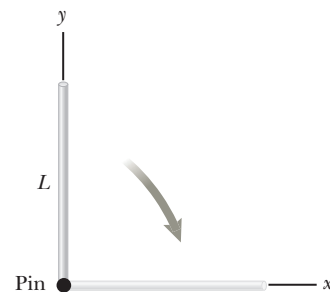


Figure P10.73

74. A bicycle is turned upside down while its owner repairs a flat tire on the rear wheel. A friend spins the front wheel, of radius 0.381 m, and observes that drops of water fly off tangentially in an upward direction when the drops are at the same level as the center of the wheel. She measures the height reached by drops moving vertically (Fig. P10.74 on page 332). A drop

that breaks loose from the tire on one turn rises $h = 54.0$ cm above the tangent point. A drop that breaks loose on the next turn rises 51.0 cm above the tangent point. The height to which the drops rise decreases because the angular speed of the wheel decreases. From this information, determine the magnitude of the average angular acceleration of the wheel.

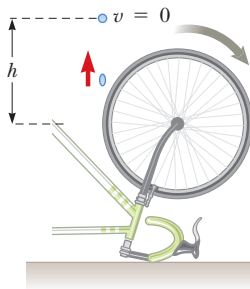


Figure P10.74 Problems 74 and 75.

75. A bicycle is turned upside down while its owner repairs a flat tire on the rear wheel. A friend spins the front wheel, of radius R , and observes that drops of water fly off tangentially in an upward direction when the drops are at the same level as the center of the wheel. She measures the height reached by drops moving vertically (Fig. P10.74). A drop that breaks loose from the tire on one turn rises a distance h_1 above the tangent point. A drop that breaks loose on the next turn rises a distance $h_2 < h_1$ above the tangent point. The height to which the drops rise decreases because the angular speed of the wheel decreases. From this information, determine the magnitude of the average angular acceleration of the wheel.

76. (a) What is the rotational kinetic energy of the Earth about its spin axis? Model the Earth as a uniform sphere and use data from the endpapers of this book. (b) The rotational kinetic energy of the Earth is decreasing steadily because of tidal friction. Assuming the rotational period decreases by $10.0 \mu\text{s}$ each year, find the change in one day.

77. **Review.** As shown in Figure P10.77, two blocks are connected by a string of negligible mass passing over a pulley of radius $r = 0.250$ m and moment of inertia I . The block on the frictionless incline is moving with a constant acceleration of magnitude $a = 2.00$ m/s². From this information, we wish to find the moment of inertia of the pulley. (a) What analysis model is appropriate for the blocks? (b) What analysis model is appropriate

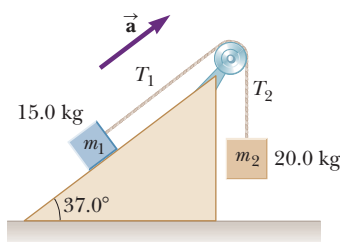


Figure P10.77

for the pulley? (c) From the analysis model in part (a), find the tension T_1 . (d) Similarly, find the tension T_2 . (e) From the analysis model in part (b), find a symbolic expression for the moment of inertia of the pulley in terms of the tensions T_1 and T_2 , the pulley radius r , and the acceleration a . (f) Find the numerical value of the moment of inertia of the pulley.

78. **Review.** A string is wound around a uniform disk of radius R and mass M . The disk is released from rest with the string vertical and its top end tied to a fixed bar (Fig. P10.78). Show that (a) the tension in the string is one third of the weight of the disk, (b) the magnitude of the acceleration of the center of mass is $2g/3$, and (c) the speed of the center of mass is $(4gh/3)^{1/2}$ after the disk has descended through distance h . (d) Verify your answer to part (c) using the energy approach.

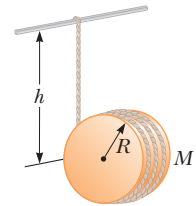


Figure P10.78

79. The reel shown in Figure P10.79 has radius R and moment of inertia I . One end of the block of mass m is connected to a spring of force constant k , and the other end is fastened to a cord wrapped around the reel. The reel axle and the incline are frictionless. The reel is wound counterclockwise so that the spring stretches a distance d from its unstretched position and the reel is then released from rest. Find the angular speed of the reel when the spring is again unstretched.

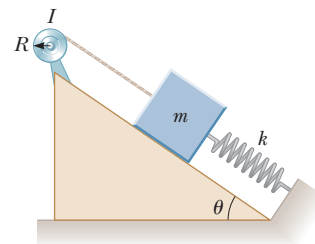


Figure P10.79

80. A common demonstration, illustrated in Figure P10.80, consists of a ball resting at one end of a uniform board of length ℓ that is hinged at the other end and elevated at an angle θ . A light cup is attached to the board at r_c so that it will catch the ball when the support stick is removed suddenly. (a) Show that the ball will lag behind the falling board when θ is less than 35.3° .

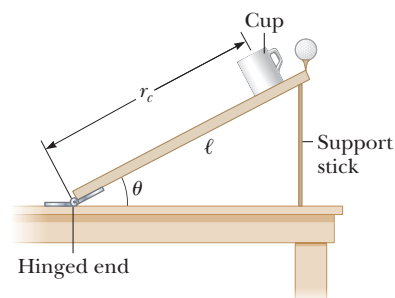


Figure P10.80

(b) Assuming the board is 1.00 m long and is supported at this limiting angle, show that the cup must be 18.4 cm from the moving end.

81. A uniform solid sphere of radius r is placed on the inside surface of a hemispherical bowl with radius R . The sphere is released from rest at an angle θ to the vertical and rolls without slipping (Fig. P10.81). Determine the angular speed of the sphere when it reaches the bottom of the bowl.

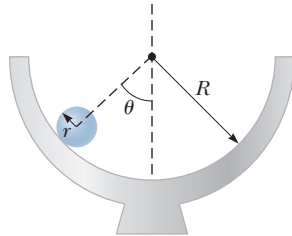


Figure P10.81

82. **Review.** A spool of wire of mass M and radius R is unwound under a constant force \vec{F} (Fig. P10.82). Assuming the spool is a uniform, solid cylinder that doesn't slip, show that (a) the acceleration of the center of mass is $4\vec{F}/3M$ and (b) the force of friction is to the right and equal in magnitude to $F/3$. (c) If the cylinder starts from rest and rolls without slipping, what is the speed of its center of mass after it has rolled through a distance d ?

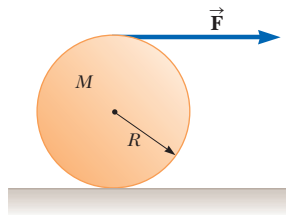


Figure P10.82

83. A solid sphere of mass m and radius r rolls without slipping along the track shown in Figure P10.83. It starts from rest with the lowest point of the sphere at height h above the bottom of the loop of radius R , much larger than r . (a) What is the minimum value of h (in terms of R) such that the sphere completes the loop? (b) What are the force components on the sphere at the point P if $h = 3R$?

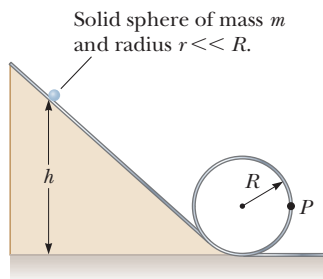


Figure P10.83

84. A thin rod of mass 0.630 kg and length 1.24 m is at rest, hanging vertically from a strong, fixed hinge at its

top end. Suddenly, a horizontal impulsive force $14.7\hat{i}$ N is applied to it. (a) Suppose the force acts at the bottom end of the rod. Find the acceleration of its center of mass and (b) the horizontal force the hinge exerts. (c) Suppose the force acts at the midpoint of the rod. Find the acceleration of this point and (d) the horizontal hinge reaction force. (e) Where can the impulse be applied so that the hinge will exert no horizontal force? This point is called the *center of percussion*.

85. A thin rod of length h and mass M is held vertically with its lower end resting on a frictionless, horizontal surface. The rod is then released to fall freely. (a) Determine the speed of its center of mass just before it hits the horizontal surface. (b) **What If?** Now suppose the rod has a fixed pivot at its lower end. Determine the speed of the rod's center of mass just before it hits the surface.
86. **Review.** A clown balances a small spherical grape at the top of his bald head, which also has the shape of a sphere. After drawing sufficient applause, the grape starts from rest and rolls down without slipping. It will leave contact with the clown's scalp when the radial line joining it to the center of curvature makes what angle with the vertical?

Challenge Problems

87. A plank with a mass $M = 6.00$ kg rests on top of two identical, solid, cylindrical rollers that have $R = 5.00$ cm and $m = 2.00$ kg (Fig. P10.87). The plank is pulled by a constant horizontal force \vec{F} of magnitude 6.00 N applied to the end of the plank and perpendicular to the axes of the cylinders (which are parallel). The cylinders roll without slipping on a flat surface. There is also no slipping between the cylinders and the plank. (a) Find the initial acceleration of the plank at the moment the rollers are equidistant from the ends of the plank. (b) Find the acceleration of the rollers at this moment. (c) What friction forces are acting at this moment?

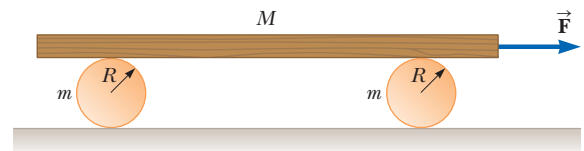


Figure P10.87

88. As a gasoline engine operates, a flywheel turning with the crankshaft stores energy after each fuel explosion, providing the energy required to compress the next charge of fuel and air. For the engine of a certain lawn tractor, suppose a flywheel must be no more than 18.0 cm in diameter. Its thickness, measured along its axis of rotation, must be no larger than 8.00 cm. The flywheel must release energy 60.0 J when its angular speed drops from 800 rev/min to 600 rev/min. Design a sturdy steel (density 7.85×10^3 kg/m³) flywheel to meet these requirements with the smallest mass you can reasonably attain. Specify the shape and mass of the flywheel.

- 89.** As a result of friction, the angular speed of a wheel changes with time according to

$$\frac{d\theta}{dt} = \omega_0 e^{-\sigma t}$$

where ω_0 and σ are constants. The angular speed changes from 3.50 rad/s at $t = 0$ to 2.00 rad/s at $t = 9.30$ s. (a) Use this information to determine σ and ω_0 . Then determine (b) the magnitude of the angular acceleration at $t = 3.00$ s, (c) the number of revolutions the wheel makes in the first 2.50 s, and (d) the number of revolutions it makes before coming to rest.

- 90.** To find the total angular displacement during the playing time of the compact disc in part (B) of Example 10.2, the disc was modeled as a rigid object under constant angular acceleration. In reality, the angular acceleration of a disc is not constant. In this problem, let us explore the actual time dependence of the angular acceleration. (a) Assume the track on the disc is a spiral such that adjacent loops of the track are separated by a small distance h . Show that the radius r of a given portion of the track is given by

$$r = r_i + \frac{h\theta}{2\pi}$$

where r_i is the radius of the innermost portion of the track and θ is the angle through which the disc turns to arrive at the location of the track of radius r . (b) Show that the rate of change of the angle θ is given by

$$\frac{d\theta}{dt} = \frac{v}{r_i + (h\theta/2\pi)}$$

where v is the constant speed with which the disc surface passes the laser. (c) From the result in part (b), use integration to find an expression for the angle θ as a function of time. (d) From the result in part (c), use differentiation to find the angular acceleration of the disc as a function of time.

- 91.** A spool of thread consists of a cylinder of radius R_1 with end caps of radius R_2 as depicted in the end view shown in Figure P10.91. The mass of the spool, including the thread, is m , and its moment of inertia about an axis through its center is I . The spool is placed on a rough, horizontal surface so that it rolls without slipping when a force \vec{T} acting to the right is applied to the free end of the thread. (a) Show that the magnitude of the friction force exerted by the surface on the spool is given by

$$f = \left(\frac{I + mR_1R_2}{I + mR_2^2} \right) T$$

(b) Determine the direction of the force of friction.

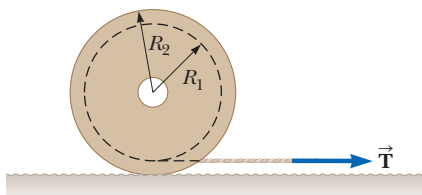


Figure P10.91

- 92.** A cord is wrapped around a pulley that is shaped like a disk of mass m and radius r . The cord's free end is connected to a block of mass M . The block starts from rest and then slides down an incline that makes an angle θ with the horizontal as shown in Figure P10.92. The coefficient of kinetic friction between block and incline is μ . (a) Use energy methods to show that the block's speed as a function of position d down the incline is

$$v = \sqrt{\frac{4Mgd(\sin\theta - \mu\cos\theta)}{m + 2M}}$$

(b) Find the magnitude of the acceleration of the block in terms of μ , m , M , g , and θ .

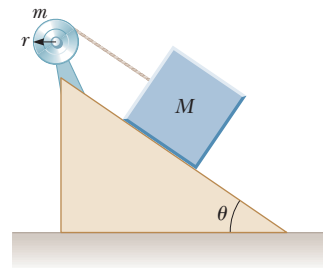


Figure P10.92

- 93.** A merry-go-round is stationary. A dog is running around the merry-go-round on the ground just outside its circumference, moving with a constant angular speed of 0.750 rad/s. The dog does not change his pace when he sees what he has been looking for: a bone resting on the edge of the merry-go-round one-third of a revolution in front of him. At the instant the dog sees the bone ($t = 0$), the merry-go-round begins to move in the direction the dog is running, with a constant angular acceleration of 0.015 0 rad/s². (a) At what time will the dog first reach the bone? (b) The confused dog keeps running and passes the bone. How long after the merry-go-round starts to turn do the dog and the bone draw even with each other for the second time?

- 94.** A uniform, hollow, cylindrical spool has inside radius $R/2$, outside radius R , and mass M (Fig. P10.94). It is mounted so that it rotates on a fixed, horizontal axle. A counterweight of mass m is connected to the end of a string wound around the spool. The counterweight falls from rest at $t = 0$ to a position y at time t . Show that the torque due to the friction forces between spool and axle is

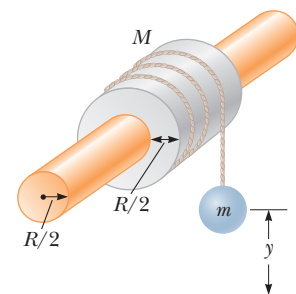


Figure P10.94

$$\tau_f = R \left[m \left(g - \frac{2y}{t^2} \right) - M \frac{5y}{4t^2} \right]$$

Angular Momentum



- 11.1 The Vector Product and Torque
- 11.2 Analysis Model: Nonisolated System (Angular Momentum)
- 11.3 Angular Momentum of a Rotating Rigid Object
- 11.4 Analysis Model: Isolated System (Angular Momentum)
- 11.5 The Motion of Gyroscopes and Tops

The central topic of this chapter is **angular momentum**, a quantity that plays a key role in rotational dynamics. In analogy to the principle of conservation of linear momentum, there is also a principle of conservation of angular momentum. The angular momentum of an isolated system is constant. For angular momentum, an isolated system is one for which no external torques act on the system. If a net external torque acts on a system, it is nonisolated. Like the law of conservation of linear momentum, the law of conservation of angular momentum is a fundamental law of physics, equally valid for relativistic and quantum systems.

Two motorcycle racers lean precariously into a turn around a racetrack. The analysis of such a leaning turn is based on principles associated with angular momentum. (Stuart Westmorland/The Image Bank/Getty Images)

11.1 The Vector Product and Torque

An important consideration in defining angular momentum is the process of multiplying two vectors by means of the operation called the *vector product*. We will introduce the vector product by considering the vector nature of torque.

Consider a force \vec{F} acting on a particle located at point P and described by the vector position \vec{r} (Fig. 11.1 on page 336). As we saw in Section 10.6, the *magnitude* of the torque due to this force about an axis through the origin is $rF \sin \phi$, where ϕ is the angle between \vec{r} and \vec{F} . The axis about which \vec{F} tends to produce rotation is perpendicular to the plane formed by \vec{r} and \vec{F} .

The torque vector $\vec{\tau}$ is related to the two vectors \vec{r} and \vec{F} . We can establish a mathematical relationship between $\vec{\tau}$, \vec{r} , and \vec{F} using a mathematical operation called the **vector product**:

$$\vec{\tau} \equiv \vec{r} \times \vec{F} \quad (11.1)$$

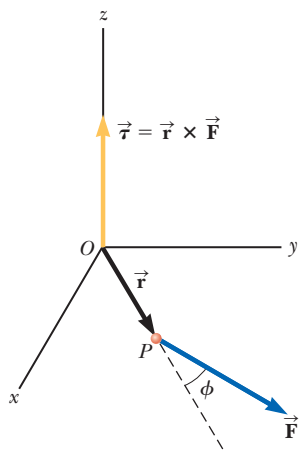


Figure 11.1 The torque vector $\vec{\tau}$ lies in a direction perpendicular to the plane formed by the position vector \vec{r} and the applied force vector \vec{F} . In the situation shown, \vec{r} and \vec{F} lie in the xy plane, so the torque is along the z axis.

Properties of the vector product

The direction of \vec{C} is perpendicular to the plane formed by \vec{A} and \vec{B} , and its direction is determined by the right-hand rule.

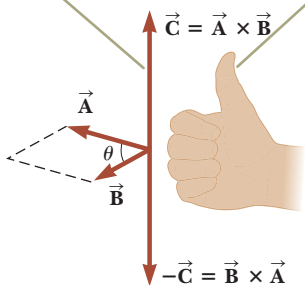


Figure 11.2 The vector product $\vec{A} \times \vec{B}$ is a third vector \vec{C} having a magnitude $AB \sin \theta$ equal to the area of the parallelogram shown.

Cross products of unit vectors

Pitfall Prevention 11.1

The Vector Product Is a Vector
Remember that the result of taking a vector product between two vectors is a *third vector*. Equation 11.3 gives only the magnitude of this vector.

We now give a formal definition of the vector product. Given any two vectors \vec{A} and \vec{B} , the vector product $\vec{A} \times \vec{B}$ is defined as a third vector \vec{C} , which has a magnitude of $AB \sin \theta$, where θ is the angle between \vec{A} and \vec{B} . That is, if \vec{C} is given by

$$\vec{C} = \vec{A} \times \vec{B} \quad (11.2)$$

its magnitude is

$$C = AB \sin \theta \quad (11.3)$$

The quantity $AB \sin \theta$ is equal to the area of the parallelogram formed by \vec{A} and \vec{B} as shown in Figure 11.2. The *direction* of \vec{C} is perpendicular to the plane formed by \vec{A} and \vec{B} , and the best way to determine this direction is to use the right-hand rule illustrated in Figure 11.2. The four fingers of the right hand are pointed along \vec{A} and then “wrapped” in the direction that would rotate \vec{A} into \vec{B} through the angle θ . The direction of the upright thumb is the direction of $\vec{A} \times \vec{B} = \vec{C}$. Because of the notation, $\vec{A} \times \vec{B}$ is often read “ \vec{A} cross \vec{B} ,” so the vector product is also called the **cross product**.

Some properties of the vector product that follow from its definition are as follows:

1. Unlike the scalar product, the vector product is *not* commutative. Instead, the order in which the two vectors are multiplied in a vector product is important:

$$\vec{A} \times \vec{B} = -\vec{B} \times \vec{A} \quad (11.4)$$

Therefore, if you change the order of the vectors in a vector product, you must change the sign. You can easily verify this relationship with the right-hand rule.

2. If \vec{A} is parallel to \vec{B} ($\theta = 0$ or 180°), then $\vec{A} \times \vec{B} = 0$; therefore, it follows that $\vec{A} \times \vec{A} = 0$.
3. If \vec{A} is perpendicular to \vec{B} , then $|\vec{A} \times \vec{B}| = AB$.
4. The vector product obeys the distributive law:

$$\vec{A} \times (\vec{B} + \vec{C}) = \vec{A} \times \vec{B} + \vec{A} \times \vec{C} \quad (11.5)$$

5. The derivative of the vector product with respect to some variable such as t is

$$\frac{d}{dt}(\vec{A} \times \vec{B}) = \frac{d\vec{A}}{dt} \times \vec{B} + \vec{A} \times \frac{d\vec{B}}{dt} \quad (11.6)$$

where it is important to preserve the multiplicative order of the terms on the right side in view of Equation 11.4.

It is left as an exercise (Problem 4) to show from Equations 11.3 and 11.4 and from the definition of unit vectors that the cross products of the unit vectors \hat{i} , \hat{j} , and \hat{k} obey the following rules:

$$\hat{i} \times \hat{i} = \hat{j} \times \hat{j} = \hat{k} \times \hat{k} = 0 \quad (11.7a)$$

$$\hat{i} \times \hat{j} = -\hat{j} \times \hat{i} = \hat{k} \quad (11.7b)$$

$$\hat{j} \times \hat{k} = -\hat{k} \times \hat{j} = \hat{i} \quad (11.7c)$$

$$\hat{k} \times \hat{i} = -\hat{i} \times \hat{k} = \hat{j} \quad (11.7d)$$

Signs are interchangeable in cross products. For example, $\vec{A} \times (-\vec{B}) = -\vec{A} \times \vec{B}$ and $\hat{i} \times (-\hat{j}) = -\hat{i} \times \hat{j}$.

The cross product of any two vectors \vec{A} and \vec{B} can be expressed in the following determinant form:

$$\vec{A} \times \vec{B} = \begin{vmatrix} \hat{i} & \hat{j} & \hat{k} \\ A_x & A_y & A_z \\ B_x & B_y & B_z \end{vmatrix} = \begin{vmatrix} A_y & A_z \\ B_y & B_z \end{vmatrix} \hat{i} + \begin{vmatrix} A_z & A_x \\ B_z & B_x \end{vmatrix} \hat{j} + \begin{vmatrix} A_x & A_y \\ B_x & B_y \end{vmatrix} \hat{k}$$

Expanding these determinants gives the result

$$\vec{\mathbf{A}} \times \vec{\mathbf{B}} = (A_y B_z - A_z B_y) \hat{\mathbf{i}} + (A_z B_x - A_x B_z) \hat{\mathbf{j}} + (A_x B_y - A_y B_x) \hat{\mathbf{k}} \quad (11.8)$$

Given the definition of the cross product, we can now assign a direction to the torque vector. If the force lies in the xy plane as in Figure 11.1, the torque $\vec{\boldsymbol{\tau}}$ is represented by a vector parallel to the z axis. The force in Figure 11.1 creates a torque that tends to rotate the particle counterclockwise about the z axis; the direction of $\vec{\boldsymbol{\tau}}$ is toward increasing z , and $\vec{\boldsymbol{\tau}}$ is therefore in the positive z direction. If we reversed the direction of $\vec{\mathbf{F}}$ in Figure 11.1, $\vec{\boldsymbol{\tau}}$ would be in the negative z direction.

- Quick Quiz 11.1** Which of the following statements about the relationship between the magnitude of the cross product of two vectors and the product of the magnitudes of the vectors is true? (a) $|\vec{\mathbf{A}} \times \vec{\mathbf{B}}|$ is larger than AB . (b) $|\vec{\mathbf{A}} \times \vec{\mathbf{B}}|$ is smaller than AB . (c) $|\vec{\mathbf{A}} \times \vec{\mathbf{B}}|$ could be larger or smaller than AB , depending on the angle between the vectors. (d) $|\vec{\mathbf{A}} \times \vec{\mathbf{B}}|$ could be equal to AB .

Example 11.1 The Vector Product

Two vectors lying in the xy plane are given by the equations $\vec{\mathbf{A}} = 2\hat{\mathbf{i}} + 3\hat{\mathbf{j}}$ and $\vec{\mathbf{B}} = -\hat{\mathbf{i}} + 2\hat{\mathbf{j}}$. Find $\vec{\mathbf{A}} \times \vec{\mathbf{B}}$ and verify that $\vec{\mathbf{A}} \times \vec{\mathbf{B}} = -\vec{\mathbf{B}} \times \vec{\mathbf{A}}$.

SOLUTION

Conceptualize Given the unit-vector notations of the vectors, think about the directions the vectors point in space. Draw them on graph paper and imagine the parallelogram shown in Figure 11.2 for these vectors.

Categorize Because we use the definition of the cross product discussed in this section, we categorize this example as a substitution problem.

Write the cross product of the two vectors:

$$\vec{\mathbf{A}} \times \vec{\mathbf{B}} = (2\hat{\mathbf{i}} + 3\hat{\mathbf{j}}) \times (-\hat{\mathbf{i}} + 2\hat{\mathbf{j}})$$

Perform the multiplication:

$$\vec{\mathbf{A}} \times \vec{\mathbf{B}} = 2\hat{\mathbf{i}} \times (-\hat{\mathbf{i}}) + 2\hat{\mathbf{i}} \times 2\hat{\mathbf{j}} + 3\hat{\mathbf{j}} \times (-\hat{\mathbf{i}}) + 3\hat{\mathbf{j}} \times 2\hat{\mathbf{j}}$$

Use Equations 11.7a through 11.7d to evaluate the various terms:

$$\vec{\mathbf{A}} \times \vec{\mathbf{B}} = 0 + 4\hat{\mathbf{k}} + 3\hat{\mathbf{k}} + 0 = 7\hat{\mathbf{k}}$$

To verify that $\vec{\mathbf{A}} \times \vec{\mathbf{B}} = -\vec{\mathbf{B}} \times \vec{\mathbf{A}}$, evaluate $\vec{\mathbf{B}} \times \vec{\mathbf{A}}$:

$$\vec{\mathbf{B}} \times \vec{\mathbf{A}} = (-\hat{\mathbf{i}} + 2\hat{\mathbf{j}}) \times (2\hat{\mathbf{i}} + 3\hat{\mathbf{j}})$$

Perform the multiplication:

$$\vec{\mathbf{B}} \times \vec{\mathbf{A}} = (-\hat{\mathbf{i}}) \times 2\hat{\mathbf{i}} + (-\hat{\mathbf{i}}) \times 3\hat{\mathbf{j}} + 2\hat{\mathbf{j}} \times 2\hat{\mathbf{i}} + 2\hat{\mathbf{j}} \times 3\hat{\mathbf{j}}$$

Use Equations 11.7a through 11.7d to evaluate the various terms:

$$\vec{\mathbf{B}} \times \vec{\mathbf{A}} = 0 - 3\hat{\mathbf{k}} - 4\hat{\mathbf{k}} + 0 = -7\hat{\mathbf{k}}$$

Therefore, $\vec{\mathbf{A}} \times \vec{\mathbf{B}} = -\vec{\mathbf{B}} \times \vec{\mathbf{A}}$. As an alternative method for finding $\vec{\mathbf{A}} \times \vec{\mathbf{B}}$, you could use Equation 11.8. Try it!

Example 11.2 The Torque Vector

A force of $\vec{\mathbf{F}} = (2.00\hat{\mathbf{i}} + 3.00\hat{\mathbf{j}})$ N is applied to an object that is pivoted about a fixed axis aligned along the z coordinate axis. The force is applied at a point located at $\vec{\mathbf{r}} = (4.00\hat{\mathbf{i}} + 5.00\hat{\mathbf{j}})$ m. Find the torque $\vec{\boldsymbol{\tau}}$ applied to the object.

SOLUTION

Conceptualize Given the unit-vector notations, think about the directions of the force and position vectors. If this force were applied at this position, in what direction would an object pivoted at the origin turn?

continued

11.2 continued

Categorize Because we use the definition of the cross product discussed in this section, we categorize this example as a substitution problem.

Set up the torque vector using Equation 11.1:

$$\vec{\tau} = \vec{r} \times \vec{F} = [(4.00 \hat{i} + 5.00 \hat{j}) \text{ m}] \times [(2.00 \hat{i} + 3.00 \hat{j}) \text{ N}]$$

Perform the multiplication:

$$\begin{aligned} \vec{\tau} = & [(4.00)(2.00) \hat{i} \times \hat{i} + (4.00)(3.00) \hat{i} \times \hat{j} \\ & + (5.00)(2.00) \hat{j} \times \hat{i} + (5.00)(3.00) \hat{j} \times \hat{j}] \text{ N} \cdot \text{m} \end{aligned}$$

Use Equations 11.7a through 11.7d to evaluate the various terms:

$$\vec{\tau} = [0 + 12.0 \hat{k} - 10.0 \hat{k} + 0] \text{ N} \cdot \text{m} = 2.0 \hat{k} \text{ N} \cdot \text{m}$$

Notice that both \vec{r} and \vec{F} are in the xy plane. As expected, the torque vector is perpendicular to this plane, having only a z component. We have followed the rules for significant figures discussed in Section 1.6, which lead to an answer with two significant figures. We have lost some precision because we ended up subtracting two numbers that are close.

11.2 Analysis Model: Nonisolated System (Angular Momentum)




Figure 11.3 As the skater passes the pole, she grabs hold of it, which causes her to swing around the pole rapidly in a circular path.

Imagine a rigid pole sticking up through the ice on a frozen pond (Fig. 11.3). A skater glides rapidly toward the pole, aiming a little to the side so that she does not hit it. As she passes the pole, she reaches out to her side and grabs it, an action that causes her to move in a circular path around the pole. Just as the idea of linear momentum helps us analyze translational motion, a rotational analog—*angular momentum*—helps us analyze the motion of this skater and other objects undergoing rotational motion.

In Chapter 9, we developed the mathematical form of linear momentum and then proceeded to show how this new quantity was valuable in problem solving. We will follow a similar procedure for angular momentum.

Consider a particle of mass m located at the vector position \vec{r} and moving with linear momentum \vec{p} as in Figure 11.4. In describing translational motion, we found that the net force on the particle equals the time rate of change of its linear momentum, $\sum \vec{F} = d\vec{p}/dt$ (see Eq. 9.3). Let us take the cross product of each side of Equation 9.3 with \vec{r} , which gives the net torque on the particle on the left side of the equation:

$$\vec{r} \times \sum \vec{F} = \sum \vec{\tau} = \vec{r} \times \frac{d\vec{p}}{dt}$$

Now let's add to the right side the term $(d\vec{r}/dt) \times \vec{p}$, which is zero because $d\vec{r}/dt = \vec{v}$ and \vec{v} and \vec{p} are parallel. Therefore,

$$\sum \vec{\tau} = \vec{r} \times \frac{d\vec{p}}{dt} + \frac{d\vec{r}}{dt} \times \vec{p}$$

We recognize the right side of this equation as the derivative of $\vec{r} \times \vec{p}$ (see Eq. 11.6). Therefore,

$$\sum \vec{\tau} = \frac{d(\vec{r} \times \vec{p})}{dt} \quad (11.9)$$

which looks very similar in form to Equation 9.3, $\sum \vec{F} = d\vec{p}/dt$. Because torque plays the same role in rotational motion that force plays in translational motion, this result suggests that the combination $\vec{r} \times \vec{p}$ should play the same role in rota-

tional motion that \vec{p} plays in translational motion. We call this combination the *angular momentum* of the particle:

The instantaneous **angular momentum** \vec{L} of a particle relative to an axis through the origin O is defined by the cross product of the particle's instantaneous position vector \vec{r} and its instantaneous linear momentum \vec{p} :

$$\vec{L} \equiv \vec{r} \times \vec{p} \quad (11.10)$$

We can now write Equation 11.9 as

$$\sum \vec{\tau} = \frac{d\vec{L}}{dt} \quad (11.11)$$

which is the rotational analog of Newton's second law, $\sum \vec{F} = d\vec{p}/dt$. Torque causes the angular momentum \vec{L} to change just as force causes linear momentum \vec{p} to change.

Notice that Equation 11.11 is valid only if $\sum \vec{\tau}$ and \vec{L} are measured about the same axis. Furthermore, the expression is valid for any axis fixed in an inertial frame.

The SI unit of angular momentum is $\text{kg} \cdot \text{m}^2/\text{s}$. Notice also that both the magnitude and the direction of \vec{L} depend on the choice of axis. Following the right-hand rule, we see that the direction of \vec{L} is perpendicular to the plane formed by \vec{r} and \vec{p} . In Figure 11.4, \vec{r} and \vec{p} are in the xy plane, so \vec{L} points in the z direction. Because $\vec{p} = m\vec{v}$, the magnitude of \vec{L} is

$$L = mvr \sin \phi \quad (11.12)$$

where ϕ is the angle between \vec{r} and \vec{p} . It follows that L is zero when \vec{r} is parallel to \vec{p} ($\phi = 0$ or 180°). In other words, when the translational velocity of the particle is along a line that passes through the axis, the particle has zero angular momentum with respect to the axis. On the other hand, if \vec{r} is perpendicular to \vec{p} ($\phi = 90^\circ$), then $L = mvr$. At that instant, the particle moves exactly as if it were on the rim of a wheel rotating about the axis in a plane defined by \vec{r} and \vec{p} .

- Quick Quiz 11.2** Recall the skater described at the beginning of this section. Let her mass be m . (i) What would be her angular momentum relative to the pole at the instant she is a distance d from the pole if she were skating directly toward it at speed v ? (a) zero (b) $mv d$ (c) impossible to determine (ii) What would be her angular momentum relative to the pole at the instant she is a distance d from the pole if she were skating at speed v along a straight path that is a perpendicular distance a from the pole? (a) zero (b) $mv d$ (c) mva (d) impossible to determine

Example 11.3 Angular Momentum of a Particle in Circular Motion

A particle moves in the xy plane in a circular path of radius r as shown in Figure 11.5. Find the magnitude and direction of its angular momentum relative to an axis through O when its velocity is \vec{v} .

SOLUTION

Conceptualize The linear momentum of the particle is always changing in direction (but not in magnitude). You might therefore be tempted to conclude that the angular momentum of the particle is always changing. In this situation, however, that is not the case. Let's see why.

Figure 11.5 (Example 11.3) A particle moving in a circle of radius r has an angular momentum about an axis through O that has magnitude mvr . The vector $\vec{L} = \vec{r} \times \vec{p}$ points out of the page.

Angular momentum of a particle

The angular momentum \vec{L} of a particle about an axis is a vector perpendicular to both the particle's position \vec{r} relative to the axis and its momentum \vec{p} .

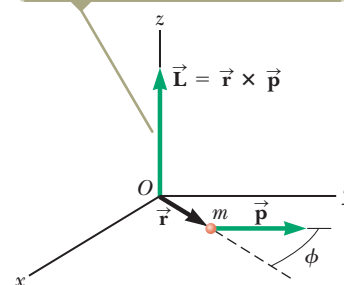
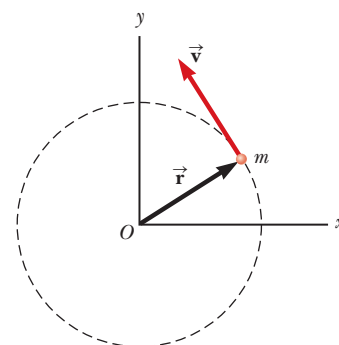


Figure 11.4 The angular momentum \vec{L} of a particle is a vector given by $\vec{L} = \vec{r} \times \vec{p}$.

Pitfall Prevention 11.2

Is Rotation Necessary for Angular Momentum? We can define angular momentum even if the particle is not moving in a circular path. A particle moving in a straight line has angular momentum about any axis displaced from the path of the particle.



continued

11.3 continued

Categorize We use the definition of the angular momentum of a particle discussed in this section, so we categorize this example as a substitution problem.

Use Equation 11.12 to evaluate the magnitude of \vec{L} : $L = mvr \sin 90^\circ = mvr$

This value of L is constant because all three factors on the right are constant. The direction of \vec{L} also is constant, even though the direction of $\vec{p} = m\vec{v}$ keeps changing. To verify this statement, apply the right-hand rule to find the direction of $\vec{L} = \vec{r} \times \vec{p} = m\vec{r} \times \vec{v}$ in Figure 11.5. Your thumb points out of the page, so that is the direction of \vec{L} . Hence, we can write the vector expression $\vec{L} = (mvr)\hat{k}$. If the particle were to move clockwise, \vec{L} would point downward and into the page and $\vec{L} = -(mvr)\hat{k}$. A particle in uniform circular motion has a constant angular momentum about an axis through the center of its path.

Angular Momentum of a System of Particles

Using the techniques of Section 9.7, we can show that Newton's second law for a system of particles is

$$\sum \vec{F}_{\text{ext}} = \frac{d\vec{p}_{\text{tot}}}{dt}$$

This equation states that the net external force on a system of particles is equal to the time rate of change of the total linear momentum of the system. Let's see if a similar statement can be made for rotational motion. The total angular momentum of a system of particles about some axis is defined as the vector sum of the angular momenta of the individual particles:

$$\vec{L}_{\text{tot}} = \vec{L}_1 + \vec{L}_2 + \cdots + \vec{L}_n = \sum_i \vec{L}_i$$

where the vector sum is over all n particles in the system.

Differentiating this equation with respect to time gives

$$\frac{d\vec{L}_{\text{tot}}}{dt} = \sum_i \frac{d\vec{L}_i}{dt} = \sum_i \vec{\tau}_i$$

where we have used Equation 11.11 to replace the time rate of change of the angular momentum of each particle with the net torque on the particle.

The torques acting on the particles of the system are those associated with internal forces between particles and those associated with external forces. The net torque associated with all internal forces, however, is zero. Recall that Newton's third law tells us that internal forces between particles of the system are equal in magnitude and opposite in direction. If we assume these forces lie along the line of separation of each pair of particles, the total torque around some axis passing through an origin O due to each action–reaction force pair is zero (that is, the moment arm d from O to the line of action of the forces is equal for both particles, and the forces are in opposite directions). In the summation, therefore, the net internal torque is zero. We conclude that the total angular momentum of a system can vary with time only if a net external torque is acting on the system:

$$\sum \vec{\tau}_{\text{ext}} = \frac{d\vec{L}_{\text{tot}}}{dt} \quad (11.13)$$

The net external torque on a system equals the time rate of change of angular momentum of the system

This equation is indeed the rotational analog of $\sum \vec{F}_{\text{ext}} = d\vec{p}_{\text{tot}}/dt$ for a system of particles. Equation 11.13 is the mathematical representation of the **angular momentum version of the nonisolated system model**. If a system is nonisolated in the sense that there is a net torque on it, the torque is equal to the time rate of change of angular momentum.

Although we do not prove it here, this statement is true regardless of the motion of the center of mass. It applies even if the center of mass is accelerating, provided

the torque and angular momentum are evaluated relative to an axis through the center of mass.

Equation 11.13 can be rearranged and integrated to give

$$\Delta \vec{L}_{\text{tot}} = \int (\sum \vec{\tau}_{\text{ext}}) dt$$

This equation represents the *angular impulse–angular momentum theorem*. Compare this equation to the translational version, Equation 9.40.

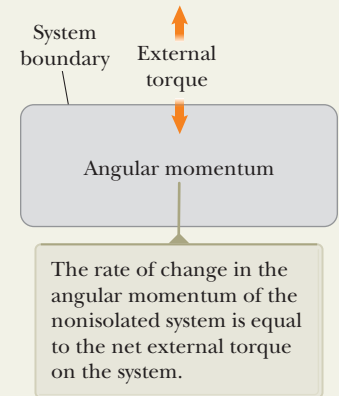
Analysis Model Nonisolated System (Angular Momentum)

Imagine a system that rotates about an axis. If there is a net external torque acting on the system, the time rate of change of the angular momentum of the system is equal to the net external torque:

$$\sum \vec{\tau}_{\text{ext}} = \frac{d\vec{L}_{\text{tot}}}{dt} \quad (11.13)$$

Examples:

- a flywheel in an automobile engine increases its angular momentum when the engine applies torque to it
- the tub of a washing machine decreases in angular momentum due to frictional torque after the machine is turned off
- the axis of the Earth undergoes a precessional motion due to the torque exerted on the Earth by the gravitational force from the Sun
- the armature of a motor increases its angular momentum due to the torque exerted by a surrounding magnetic field (Chapter 31)



Example 11.4

A System of Objects **AM**

A sphere of mass m_1 and a block of mass m_2 are connected by a light cord that passes over a pulley as shown in Figure 11.6. The radius of the pulley is R , and the mass of the thin rim is M . The spokes of the pulley have negligible mass. The block slides on a frictionless, horizontal surface. Find an expression for the linear acceleration of the two objects, using the concepts of angular momentum and torque.

SOLUTION

Conceptualize When the system is released, the block slides to the left, the sphere drops downward, and the pulley rotates counterclockwise. This situation is similar to problems we have solved earlier except that now we want to use an angular momentum approach.

Categorize We identify the block, pulley, and sphere as a *nonisolated system for angular momentum*, subject to the external torque due to the gravitational force on the sphere. We shall calculate the angular momentum about an axis that coincides with the axle of the pulley. The angular momentum of the system includes that of two objects moving translationally (the sphere and the block) and one object undergoing pure rotation (the pulley).

Analyze At any instant of time, the sphere and the block have a common speed v , so the angular momentum of the sphere about the pulley axle is $m_1 v R$ and that of the block is $m_2 v R$. At the same instant, all points on the rim of the pulley also move with speed v , so the angular momentum of the pulley is $M v R$.

Now let's address the total external torque acting on the system about the pulley axle. Because it has a moment arm of zero, the force exerted by the axle on the pulley does not contribute to the torque. Furthermore, the normal force

continued

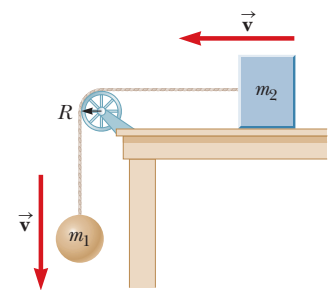


Figure 11.6 (Example 11.4) When the system is released, the sphere moves downward and the block moves to the left.

11.4 continued

acting on the block is balanced by the gravitational force $m_2\vec{g}$, so these forces do not contribute to the torque. The gravitational force $m_1\vec{g}$ acting on the sphere produces a torque about the axle equal in magnitude to m_1gR , where R is the moment arm of the force about the axle. This result is the total external torque about the pulley axle; that is, $\Sigma \tau_{\text{ext}} = m_1gR$.

Write an expression for the total angular momentum of the system:

$$(1) \quad L = m_1vR + m_2vR + MvR = (m_1 + m_2 + M)vR$$

Substitute this expression and the total external torque into Equation 11.13, the mathematical representation of the nonisolated system model for angular momentum:

$$\Sigma \tau_{\text{ext}} = \frac{dL}{dt}$$

$$m_1gR = \frac{d}{dt} [(m_1 + m_2 + M)vR]$$

$$(2) \quad m_1gR = (m_1 + m_2 + M)R \frac{dv}{dt}$$

Recognizing that $dv/dt = a$, solve Equation (2) for a :

$$(3) \quad a = \frac{m_1g}{m_1 + m_2 + M}$$

Finalize When we evaluated the net torque about the axle, we did not include the forces that the cord exerts on the objects because these forces are internal to the system under consideration. Instead, we analyzed the system as a whole. Only *external* torques contribute to the change in the system's angular momentum. Let $M \rightarrow 0$ in Equation (3) and call the result Equation A. Now go back to Equation (5) in Example 5.10, let $\theta \rightarrow 0$, and call the result Equation B. Do Equations A and B match? Looking at Figures 5.15 and 11.6 in these limits, *should* the two equations match?

11.3 Angular Momentum of a Rotating Rigid Object

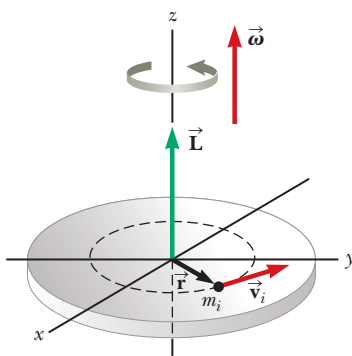


Figure 11.7 When a rigid object rotates about an axis, the angular momentum \vec{L} is in the same direction as the angular velocity $\vec{\omega}$ according to the expression $\vec{L} = I\vec{\omega}$.

In Example 11.4, we considered the angular momentum of a deformable system of particles. Let us now restrict our attention to a nondeformable system, a rigid object. Consider a rigid object rotating about a fixed axis that coincides with the z axis of a coordinate system as shown in Figure 11.7. Let's determine the angular momentum of this object. Each *particle* of the object rotates in the xy plane about the z axis with an angular speed ω . The magnitude of the angular momentum of a particle of mass m_i about the z axis is $m_iv_ir_i$. Because $v_i = r_i\omega$ (Eq. 10.10), we can express the magnitude of the angular momentum of this particle as

$$L_i = m_ir_i^2\omega$$

The vector \vec{L}_i for this particle is directed along the z axis, as is the vector $\vec{\omega}$.

We can now find the angular momentum (which in this situation has only a z component) of the whole object by taking the sum of L_i over all particles:

$$L_z = \sum_i L_i = \sum_i m_ir_i^2\omega = \left(\sum_i m_ir_i^2 \right) \omega$$

$$L_z = I\omega \quad (11.14)$$

where we have recognized $\sum_i m_ir_i^2$ as the moment of inertia I of the object about the z axis (Eq. 10.19). Notice that Equation 11.14 is mathematically similar in form to Equation 9.2 for linear momentum: $\vec{p} = m\vec{v}$.

Now let's differentiate Equation 11.14 with respect to time, noting that I is constant for a rigid object:

$$\frac{dL_z}{dt} = I \frac{d\omega}{dt} = I\alpha \quad (11.15)$$

where α is the angular acceleration relative to the axis of rotation. Because dL_z/dt is equal to the net external torque (see Eq. 11.13), we can express Equation 11.15 as

$$\sum \tau_{\text{ext}} = I\alpha \quad (11.16)$$

◀ Rotational form of Newton's second law

That is, the net external torque acting on a rigid object rotating about a fixed axis equals the moment of inertia about the rotation axis multiplied by the object's angular acceleration relative to that axis. This result is the same as Equation 10.18, which was derived using a force approach, but we derived Equation 11.16 using the concept of angular momentum. As we saw in Section 10.7, Equation 11.16 is the mathematical representation of the rigid object under a net torque analysis model. This equation is also valid for a rigid object rotating about a moving axis, provided the moving axis (1) passes through the center of mass and (2) is a symmetry axis.

If a symmetrical object rotates about a fixed axis passing through its center of mass, you can write Equation 11.14 in vector form as $\vec{L} = I\vec{\omega}$, where \vec{L} is the total angular momentum of the object measured with respect to the axis of rotation. Furthermore, the expression is valid for any object, regardless of its symmetry, if \vec{L} stands for the component of angular momentum along the axis of rotation.¹

- Quick Quiz 11.3** A solid sphere and a hollow sphere have the same mass and radius. They are rotating with the same angular speed. Which one has the higher angular momentum? (a) the solid sphere (b) the hollow sphere (c) both have the same angular momentum (d) impossible to determine

Example 11.5 Bowling Ball

Estimate the magnitude of the angular momentum of a bowling ball spinning at 10 rev/s as shown in Figure 11.8.

SOLUTION

Conceptualize Imagine spinning a bowling ball on the smooth floor of a bowling alley. Because a bowling ball is relatively heavy, the angular momentum should be relatively large.

Categorize We evaluate the angular momentum using Equation 11.14, so we categorize this example as a substitution problem.

We start by making some estimates of the relevant physical parameters and model the ball as a uniform solid sphere. A typical bowling ball might have a mass of 7.0 kg and a radius of 12 cm.

Evaluate the moment of inertia of the ball about an axis through its center from Table 10.2:

$$I = \frac{2}{5}MR^2 = \frac{2}{5}(7.0 \text{ kg})(0.12 \text{ m})^2 = 0.040 \text{ kg} \cdot \text{m}^2$$

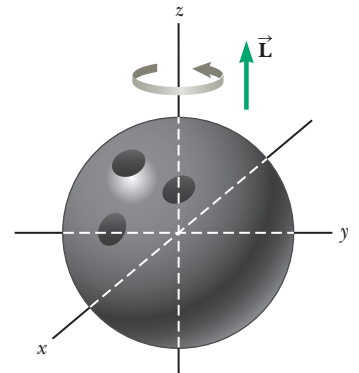
Evaluate the magnitude of the angular momentum from Equation 11.14:

$$L_z = I\omega = (0.040 \text{ kg} \cdot \text{m}^2)(10 \text{ rev/s})(2\pi \text{ rad/rev}) = 2.53 \text{ kg} \cdot \text{m}^2/\text{s}$$

Because of the roughness of our estimates, we should keep only one significant figure, so $L_z = 3 \text{ kg} \cdot \text{m}^2/\text{s}$.

Figure 11.8 (Example 11.5)

A bowling ball that rotates about the z axis in the direction shown has an angular momentum \vec{L} in the positive z direction. If the direction of rotation is reversed, then \vec{L} points in the negative z direction.



¹In general, the expression $\vec{L} = I\vec{\omega}$ is not always valid. If a rigid object rotates about an *arbitrary* axis, then \vec{L} and $\vec{\omega}$ may point in different directions. In this case, the moment of inertia cannot be treated as a scalar. Strictly speaking, $\vec{L} = I\vec{\omega}$ applies only to rigid objects of any shape that rotate about one of three mutually perpendicular axes (called *principal axes*) through the center of mass. This concept is discussed in more advanced texts on mechanics.

Example 11.6 The Seesaw AM

A father of mass m_f and his daughter of mass m_d sit on opposite ends of a seesaw at equal distances from the pivot at the center (Fig. 11.9). The seesaw is modeled as a rigid rod of mass M and length ℓ and is pivoted without friction. At a given moment, the combination rotates in a vertical plane with an angular speed ω .

(A) Find an expression for the magnitude of the system's angular momentum.

SOLUTION

Conceptualize Identify the z axis through O as the axis of rotation in Figure 11.9. The rotating system has angular momentum about that axis.

Categorize Ignore any movement of arms or legs of the father and daughter and model them both as particles. The system is therefore modeled as a rigid object. This first part of the example is categorized as a substitution problem.

The moment of inertia of the system equals the sum of the moments of inertia of the three components: the seesaw and the two individuals. We can refer to Table 10.2 to obtain the expression for the moment of inertia of the rod and use the particle expression $I = mr^2$ for each person.

Find the total moment of inertia of the system about the z axis through O :

$$I = \frac{1}{12}M\ell^2 + m_f\left(\frac{\ell}{2}\right)^2 + m_d\left(\frac{\ell}{2}\right)^2 = \frac{\ell^2}{4}\left(\frac{M}{3} + m_f + m_d\right)$$

Find the magnitude of the angular momentum of the system:

$$L = I\omega = \frac{\ell^2}{4}\left(\frac{M}{3} + m_f + m_d\right)\omega$$

(B) Find an expression for the magnitude of the angular acceleration of the system when the seesaw makes an angle θ with the horizontal.

SOLUTION

Conceptualize Generally, fathers are more massive than daughters, so the system is not in equilibrium and has an angular acceleration. We expect the angular acceleration to be positive in Figure 11.9.

Categorize The combination of the board, father, and daughter is a *rigid object under a net torque* because of the external torque associated with the gravitational forces on the father and daughter. We again identify the axis of rotation as the z axis in Figure 11.9.

Analyze To find the angular acceleration of the system at any angle θ , we first calculate the net torque on the system and then use $\Sigma \tau_{\text{ext}} = I\alpha$ from the rigid object under a net torque model to obtain an expression for α .

Evaluate the torque due to the gravitational force on the father:

$$\tau_f = m_f g \frac{\ell}{2} \cos \theta \quad (\vec{\tau}_f \text{ out of page})$$

Evaluate the torque due to the gravitational force on the daughter:

$$\tau_d = -m_d g \frac{\ell}{2} \cos \theta \quad (\vec{\tau}_d \text{ into page})$$

Evaluate the net external torque exerted on the system:

$$\Sigma \tau_{\text{ext}} = \tau_f + \tau_d = \frac{1}{2}(m_f - m_d)g\ell \cos \theta$$

Use Equation 11.16 and I from part (A) to find α :

$$\alpha = \frac{\Sigma \tau_{\text{ext}}}{I} = \frac{2(m_f - m_d)g \cos \theta}{\ell [(M/3) + m_f + m_d]}$$

Finalize For a father more massive than his daughter, the angular acceleration is positive as expected. If the seesaw begins in a horizontal orientation ($\theta = 0$) and is released, the rotation is counterclockwise in Figure 11.9 and the father's end of the seesaw drops, which is consistent with everyday experience.

WHAT IF? Imagine the father moves inward on the seesaw to a distance d from the pivot to try to balance the two sides. What is the angular acceleration of the system in this case when it is released from an arbitrary angle θ ?

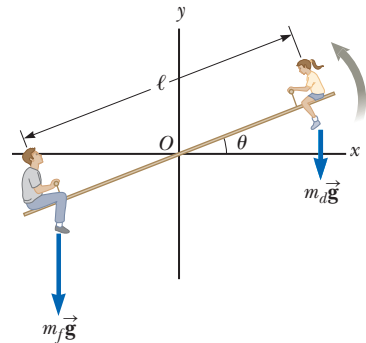


Figure 11.9 (Example 11.6) A father and daughter demonstrate angular momentum on a seesaw.

▶ 11.6 continued

Answer The angular acceleration of the system should decrease if the system is more balanced.

Find the total moment of inertia about the z axis through O for the modified system:

$$I = \frac{1}{12}M\ell^2 + m_f d^2 + m_d \left(\frac{\ell}{2}\right)^2 = \frac{\ell^2}{4} \left(\frac{M}{3} + m_d\right) + m_f d^2$$

Find the net torque exerted on the system about an axis through O :

$$\sum \tau_{\text{ext}} = \tau_f + \tau_d = m_f g d \cos \theta - \frac{1}{2} m_d g \ell \cos \theta$$

Find the new angular acceleration of the system:

$$\alpha = \frac{\sum \tau_{\text{ext}}}{I} = \frac{(m_f d - \frac{1}{2} m_d \ell) g \cos \theta}{(\ell^2/4) [(M/3) + m_d] + m_f d^2}$$

The seesaw is balanced when the angular acceleration is zero. In this situation, both father and daughter can push off the ground and rise to the highest possible point.

Find the required position of the father by setting $\alpha = 0$:

$$\alpha = \frac{(m_f d - \frac{1}{2} m_d \ell) g \cos \theta}{(\ell^2/4) [(M/3) + m_d] + m_f d^2} = 0$$

$$m_f d - \frac{1}{2} m_d \ell = 0 \quad \rightarrow \quad d = \left(\frac{m_d}{m_f}\right) \frac{\ell}{2}$$

In the rare case that the father and daughter have the same mass, the father is located at the end of the seesaw, $d = \ell/2$.

11.4 Analysis Model: Isolated System (Angular Momentum)

In Chapter 9, we found that the total linear momentum of a system of particles remains constant if the system is isolated, that is, if the net external force acting on the system is zero. We have an analogous conservation law in rotational motion:

The total angular momentum of a system is constant in both magnitude and direction if the net external torque acting on the system is zero, that is, if the system is isolated.

◀ Conservation of angular momentum

This statement is often called² the principle of **conservation of angular momentum** and is the basis of the **angular momentum version of the isolated system model**. This principle follows directly from Equation 11.13, which indicates that if

$$\sum \vec{\tau}_{\text{ext}} = \frac{d\vec{\mathbf{L}}_{\text{tot}}}{dt} = 0 \quad (11.17)$$

then

$$\Delta \vec{\mathbf{L}}_{\text{tot}} = 0 \quad (11.18)$$

Equation 11.18 can be written as

$$\vec{\mathbf{L}}_{\text{tot}} = \text{constant} \quad \text{or} \quad \vec{\mathbf{L}}_i = \vec{\mathbf{L}}_f$$

For an isolated system consisting of a small number of particles, we write this conservation law as $\vec{\mathbf{L}}_{\text{tot}} = \sum \vec{\mathbf{L}}_n = \text{constant}$, where the index n denotes the n th particle in the system.

If an isolated rotating system is deformable so that its mass undergoes redistribution in some way, the system's moment of inertia changes. Because the magnitude of the angular momentum of the system is $L = I\omega$ (Eq. 11.14), conservation

²The most general conservation of angular momentum equation is Equation 11.13, which describes how the system interacts with its environment.

When his arms and legs are close to his body, the skater's moment of inertia is small and his angular speed is large.



Clive Rose/Getty Images

To slow down for the finish of his spin, the skater moves his arms and legs outward, increasing his moment of inertia.



Al Bello/Getty Images

Figure 11.10 Angular momentum is conserved as Russian gold medalist Evgeni Plushenko performs during the Turin 2006 Winter Olympic Games.

of angular momentum requires that the product of I and ω must remain constant. Therefore, a change in I for an isolated system requires a change in ω . In this case, we can express the principle of conservation of angular momentum as

$$I_i\omega_i = I_f\omega_f = \text{constant} \quad (11.19)$$

This expression is valid both for rotation about a fixed axis and for rotation about an axis through the center of mass of a moving system as long as that axis remains fixed in direction. We require only that the net external torque be zero.

Many examples demonstrate conservation of angular momentum for a deformable system. You may have observed a figure skater spinning in the finale of a program (Fig. 11.10). The angular speed of the skater is large when his hands and feet are close to the trunk of his body. (Notice the skater's hair!) Ignoring friction between skater and ice, there are no external torques on the skater. The moment of inertia of his body increases as his hands and feet are moved away from his body at the finish of the spin. According to the isolated system model for angular momentum, his angular speed must decrease. In a similar way, when divers or acrobats wish to make several somersaults, they pull their hands and feet close to their bodies to rotate at a higher rate. In these cases, the external force due to gravity acts through the center of mass and hence exerts no torque about an axis through this point. Therefore, the angular momentum about the center of mass must be conserved; that is, $I_i\omega_i = I_f\omega_f$. For example, when divers wish to double their angular speed, they must reduce their moment of inertia to half its initial value.

In Equation 11.18, we have a third version of the isolated system model. We can now state that the energy, linear momentum, and angular momentum of an isolated system are all constant:

$$\begin{aligned} \Delta E_{\text{system}} &= 0 && \text{(if there are no energy transfers across the system boundary)} \\ \Delta \vec{p}_{\text{tot}} &= 0 && \text{(if the net external force on the system is zero)} \\ \Delta \vec{L}_{\text{tot}} &= 0 && \text{(if the net external torque on the system is zero)} \end{aligned}$$

A system may be isolated in terms of one of these quantities but not in terms of another. If a system is nonisolated in terms of momentum or angular momentum, it will often be nonisolated also in terms of energy because the system has a net force or torque on it and the net force or torque will do work on the system. We can, however, identify systems that are nonisolated in terms of energy but isolated in terms of momentum. For example, imagine pushing inward on a balloon (the system) between your hands. Work is done in compressing the balloon, so the system is nonisolated in terms of energy, but there is zero net force on the system, so the system is isolated in terms of momentum. A similar statement could be made about twisting the ends of a long, springy piece of metal with both hands. Work is done on the metal (the system), so energy is stored in the nonisolated system as elastic potential energy, but the net torque on the system is zero. Therefore, the system is isolated in terms of angular momentum. Other examples are collisions of macroscopic objects, which represent isolated systems in terms of momentum but nonisolated systems in terms of energy because of the output of energy from the system by mechanical waves (sound).

- Quick Quiz 11.4** A competitive diver leaves the diving board and falls toward the water with her body straight and rotating slowly. She pulls her arms and legs into a tight tuck position. What happens to her rotational kinetic energy?
- (a) It increases. (b) It decreases. (c) It stays the same. (d) It is impossible to determine.

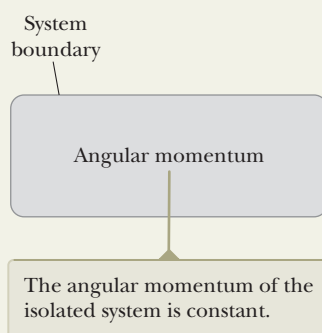
Analysis Model Isolated System (Angular Momentum)

Imagine a system rotates about an axis. If there is no net external torque on the system, there is no change in the angular momentum of the system:

$$\Delta \vec{L}_{\text{tot}} = 0 \quad (11.18)$$

Applying this law of conservation of angular momentum to a system whose moment of inertia changes gives

$$I_i \omega_i = I_f \omega_f = \text{constant} \quad (11.19)$$



Examples:

- after a supernova explosion, the core of a star collapses to a small radius and spins at a much higher rate
- the square of the orbital period of a planet is proportional to the cube of its semimajor axis; Kepler's third law (Chapter 13)
- in atomic transitions, selection rules on the quantum numbers must be obeyed in order to conserve angular momentum (Chapter 42)
- in beta decay of a radioactive nucleus, a neutrino must be emitted in order to conserve angular momentum (Chapter 44)

Example 11.7 Formation of a Neutron Star AM

A star rotates with a period of 30 days about an axis through its center. The period is the time interval required for a point on the star's equator to make one complete revolution around the axis of rotation. After the star undergoes a supernova explosion, the stellar core, which had a radius of 1.0×10^4 km, collapses into a neutron star of radius 3.0 km. Determine the period of rotation of the neutron star.

SOLUTION

Conceptualize The change in the neutron star's motion is similar to that of the skater described earlier, but in the reverse direction. As the mass of the star moves closer to the rotation axis, we expect the star to spin faster.

Categorize Let us assume that during the collapse of the stellar core, (1) no external torque acts on it, (2) it remains spherical with the same relative mass distribution, and (3) its mass remains constant. We categorize the star as an *isolated system* in terms of *angular momentum*. We do not know the mass distribution of the star, but we have assumed the distribution is symmetric, so the moment of inertia can be expressed as kMR^2 , where k is some numerical constant. (From Table 10.2, for example, we see that $k = \frac{2}{5}$ for a solid sphere and $k = \frac{2}{3}$ for a spherical shell.)

Analyze Let's use the symbol T for the period, with T_i being the initial period of the star and T_f being the period of the neutron star. The star's angular speed is given by $\omega = 2\pi/T$.

From the isolated system model for angular momentum, write Equation 11.19 for the star:

$$I_i \omega_i = I_f \omega_f$$

Use $\omega = 2\pi/T$ to rewrite this equation in terms of the initial and final periods:

$$I_i \left(\frac{2\pi}{T_i} \right) = I_f \left(\frac{2\pi}{T_f} \right)$$

Substitute the moments of inertia in the preceding equation:

$$kMR_i^2 \left(\frac{2\pi}{T_i} \right) = kMR_f^2 \left(\frac{2\pi}{T_f} \right)$$

Solve for the final period of the star:

$$T_f = \left(\frac{R_f}{R_i} \right)^2 T_i$$

Substitute numerical values:

$$T_f = \left(\frac{3.0 \text{ km}}{1.0 \times 10^4 \text{ km}} \right)^2 (30 \text{ days}) = 2.7 \times 10^{-6} \text{ days} = \boxed{0.23 \text{ s}}$$

Finalize The neutron star does indeed rotate faster after it collapses, as predicted. It moves very fast, in fact, rotating about four times each second!

Example 11.8 The Merry-Go-Round AM

A horizontal platform in the shape of a circular disk rotates freely in a horizontal plane about a frictionless, vertical axle (Fig. 11.11). The platform has a mass $M = 100$ kg and a radius $R = 2.0$ m. A student whose mass is $m = 60$ kg walks slowly from the rim of the disk toward its center. If the angular speed of the system is 2.0 rad/s when the student is at the rim, what is the angular speed when she reaches a point $r = 0.50$ m from the center?

SOLUTION

Conceptualize The speed change here is similar to those of the spinning skater and the neutron star in preceding discussions. This problem is different because part of the moment of inertia of the system changes (that of the student) while part remains fixed (that of the platform).

Categorize Because the platform rotates on a frictionless axle, we identify the system of the student and the platform as an *isolated system* in terms of *angular momentum*.

Analyze Let us denote the moment of inertia of the platform as I_p and that of the student as I_s . We model the student as a particle.

Find the initial moment of inertia I_i of the system (student plus platform) about the axis of rotation:

$$I_i = I_{pi} + I_{si} = \frac{1}{2}MR^2 + mR^2$$

Find the moment of inertia of the system when the student walks to the position $r < R$:

$$I_f = I_{pf} + I_{sf} = \frac{1}{2}MR^2 + mr^2$$

Write Equation 11.19 for the system:

$$I_i\omega_i = I_f\omega_f$$

Substitute the moments of inertia:

$$\left(\frac{1}{2}MR^2 + mR^2\right)\omega_i = \left(\frac{1}{2}MR^2 + mr^2\right)\omega_f$$

Solve for the final angular speed:

$$\omega_f = \left(\frac{\frac{1}{2}MR^2 + mR^2}{\frac{1}{2}MR^2 + mr^2}\right)\omega_i$$

Substitute numerical values:

$$\omega_f = \left[\frac{\frac{1}{2}(100 \text{ kg})(2.0 \text{ m})^2 + (60 \text{ kg})(2.0 \text{ m})^2}{\frac{1}{2}(100 \text{ kg})(2.0 \text{ m})^2 + (60 \text{ kg})(0.50 \text{ m})^2}\right](2.0 \text{ rad/s}) = 4.1 \text{ rad/s}$$

Finalize As expected, the angular speed increases. The fastest that this system could spin would be when the student moves to the center of the platform. Do this calculation to show that this maximum angular speed is 4.4 rad/s. Notice that the activity described in this problem is dangerous as discussed with regard to the Coriolis force in Section 6.3.

WHAT IF? What if you measured the kinetic energy of the system before and after the student walks inward? Are the initial kinetic energy and the final kinetic energy the same?

Answer You may be tempted to say yes because the system is isolated. Remember, however, that energy can be transformed among several forms, so we have to handle an energy question carefully.

Find the initial kinetic energy:

$$K_i = \frac{1}{2}I_i\omega_i^2 = \frac{1}{2}(440 \text{ kg} \cdot \text{m}^2)(2.0 \text{ rad/s})^2 = 880 \text{ J}$$

Find the final kinetic energy:

$$K_f = \frac{1}{2}I_f\omega_f^2 = \frac{1}{2}(215 \text{ kg} \cdot \text{m}^2)(4.1 \text{ rad/s})^2 = 1.80 \times 10^3 \text{ J}$$

Therefore, the kinetic energy of the system *increases*. The student must perform muscular activity to move herself closer to the center of rotation, so this extra kinetic energy comes from potential energy stored in the student's body from previous meals. The system is isolated in terms of energy, but a transformation process within the system changes potential energy to kinetic energy.

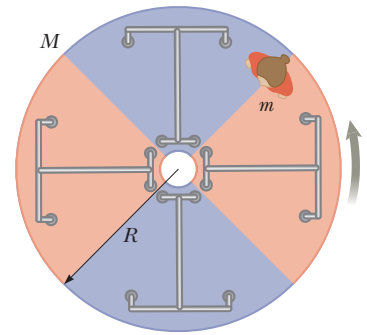


Figure 11.11 (Example 11.8) As the student walks toward the center of the rotating platform, the angular speed of the system increases because the angular momentum of the system remains constant.

Example 11.9 Disk and Stick Collision AM

A 2.0-kg disk traveling at 3.0 m/s strikes a 1.0-kg stick of length 4.0 m that is lying flat on nearly frictionless ice as shown in the overhead view of Figure 11.12a. The disk strikes at the endpoint of the stick, at a distance $r = 2.0$ m from the stick's center. Assume the collision is elastic and the disk does not deviate from its original line of motion. Find the translational speed of the disk, the translational speed of the stick, and the angular speed of the stick after the collision. The moment of inertia of the stick about its center of mass is $1.33 \text{ kg} \cdot \text{m}^2$.

SOLUTION

Conceptualize Examine Figure 11.12a and imagine what happens after the disk hits the stick. Figure 11.12b shows what you might expect: the disk continues to move at a slower speed, and the stick is in both translational and rotational motion. We assume the disk does not deviate from its original line of motion because the force exerted by the stick on the disk is parallel to the original path of the disk.

Categorize Because the ice is frictionless, the disk and stick form an *isolated system* in terms of *momentum* and *angular momentum*. Ignoring the sound made in the collision, we also model the system as an *isolated system* in terms of *energy*. In addition, because the collision is assumed to be elastic, the kinetic energy of the system is constant.

Analyze First notice that we have three unknowns, so we need three equations to solve simultaneously.

Apply the isolated system model for momentum to the system and then rearrange the result:

$$\Delta \vec{p}_{\text{tot}} = 0 \rightarrow (m_d v_{df} + m_s v_s) - m_d v_{di} = 0$$

$$(1) \quad m_d(v_{di} - v_{df}) = m_s v_s$$

Apply the isolated system model for angular momentum to the system and rearrange the result. Use an axis passing through the center of the stick as the rotation axis so that the path of the disk is a distance $r = 2.0$ m from the rotation axis:

$$\Delta \vec{L}_{\text{tot}} = 0 \rightarrow (-r m_d v_{df} + I\omega) - (-r m_d v_{di}) = 0$$

$$(2) \quad -r m_d(v_{di} - v_{df}) = I\omega$$

Apply the isolated system model for energy to the system, rearrange the equation, and factor the combination of terms related to the disk:

$$\Delta K = 0 \rightarrow \left(\frac{1}{2} m_d v_{df}^2 + \frac{1}{2} m_s v_s^2 + \frac{1}{2} I\omega^2\right) - \frac{1}{2} m_d v_{di}^2 = 0$$

$$(3) \quad m_d(v_{di} - v_{df})(v_{di} + v_{df}) = m_s v_s^2 + I\omega^2$$

Multiply Equation (1) by r and add to Equation (2):

$$r m_d(v_{di} - v_{df}) = r m_s v_s$$

$$-r m_d(v_{di} - v_{df}) = I\omega$$

$$0 = r m_s v_s + I\omega$$

Solve for ω :

$$(4) \quad \omega = -\frac{r m_s v_s}{I}$$

Divide Equation (3) by Equation (1):

$$\frac{m_d(v_{di} - v_{df})(v_{di} + v_{df})}{m_d(v_{di} - v_{df})} = \frac{m_s v_s^2 + I\omega^2}{m_s v_s}$$

$$(5) \quad v_{di} + v_{df} = v_s + \frac{I\omega^2}{m_s v_s}$$

Substitute Equation (4) into Equation (5):

$$(6) \quad v_{di} + v_{df} = v_s \left(1 + \frac{r^2 m_s}{I}\right)$$

Substitute v_{df} from Equation (1) into Equation (6):

$$v_{di} + \left(v_{di} - \frac{m_s}{m_d} v_s\right) = v_s \left(1 + \frac{r^2 m_s}{I}\right)$$

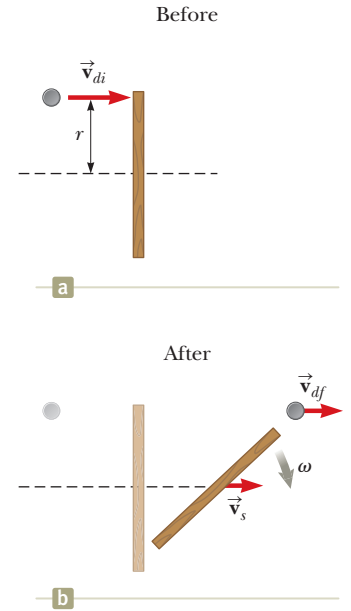


Figure 11.12 (Example 11.9) Overhead view of a disk striking a stick in an elastic collision. (a) Before the collision, the disk moves toward the stick. (b) The collision causes the stick to rotate and move to the right.

continued

11.9 continued

Solve for v_s and substitute numerical values:

$$v_s = \frac{2v_{di}}{1 + (m_s/m_d) + (r^2 m_s/I)}$$

$$= \frac{2(3.0 \text{ m/s})}{1 + (1.0 \text{ kg}/2.0 \text{ kg}) + [(2.0 \text{ m})^2(1.0 \text{ kg})/1.33 \text{ kg} \cdot \text{m}^2]} = 1.3 \text{ m/s}$$

Substitute numerical values into Equation (4):

$$\omega = -\frac{(2.0 \text{ m})(1.0 \text{ kg})(1.3 \text{ m/s})}{1.33 \text{ kg} \cdot \text{m}^2} = -2.0 \text{ rad/s}$$

Solve Equation (1) for v_{df} and substitute numerical values:

$$v_{df} = v_{di} - \frac{m_s}{m_d} v_s = 3.0 \text{ m/s} - \frac{1.0 \text{ kg}}{2.0 \text{ kg}}(1.3 \text{ m/s}) = 2.3 \text{ m/s}$$

Finalize These values seem reasonable. The disk is moving more slowly after the collision than it was before the collision, and the stick has a small translational speed. Table 11.1 summarizes the initial and final values of variables for the disk and the stick, and it verifies the conservation of linear momentum, angular momentum, and kinetic energy for the isolated system.

Table 11.1 Comparison of Values in Example 11.9 Before and After the Collision

	v (m/s)	ω (rad/s)	p (kg · m/s)	L (kg · m ² /s)	K_{trans} (J)	K_{rot} (J)
Before						
Disk	3.0	—	6.0	−12	9.0	—
Stick	0	0	0	0	0	0
Total for system	—	—	6.0	−12	9.0	0
After						
Disk	2.3	—	4.7	−9.3	5.4	—
Stick	1.3	−2.0	1.3	−2.7	0.9	2.7
Total for system	—	—	6.0	−12	6.3	2.7

Note: Linear momentum, angular momentum, and total kinetic energy of the system are all conserved.

11.5 The Motion of Gyroscopes and Tops

An unusual and fascinating type of motion you have probably observed is that of a top spinning about its axis of symmetry as shown in Figure 11.13a. If the top spins rapidly, the symmetry axis rotates about the z axis, sweeping out a cone (see Fig. 11.13b). The motion of the symmetry axis about the vertical—known as **precessional motion**—is usually slow relative to the spinning motion of the top.

It is quite natural to wonder why the top does not fall over. Because the center of mass is not directly above the pivot point O , a net torque is acting on the top about an axis passing through O , a torque resulting from the gravitational force $M\vec{g}$. The top would certainly fall over if it were not spinning. Because it is spinning, however, it has an angular momentum \vec{L} directed along its symmetry axis. We shall show that this symmetry axis moves about the z axis (precessional motion occurs) because the torque produces a change in the *direction* of the symmetry axis. This illustration is an excellent example of the importance of the vector nature of angular momentum.

The essential features of precessional motion can be illustrated by considering the simple gyroscope shown in Figure 11.14a. The two forces acting on the gyroscope are shown in Figure 11.14b: the downward gravitational force $M\vec{g}$ and the normal force \vec{n} acting upward at the pivot point O . The normal force produces no torque about an axis passing through the pivot because its moment arm through that point is zero. The gravitational force, however, produces a torque $\vec{\tau} = \vec{r} \times M\vec{g}$ about an axis passing through O , where the direction of $\vec{\tau}$ is perpendicular to the plane formed by \vec{r} and $M\vec{g}$. By necessity, the vector $\vec{\tau}$ lies in a horizontal xy plane

perpendicular to the angular momentum vector. The net torque and angular momentum of the gyroscope are related through Equation 11.13:

$$\sum \vec{\tau}_{\text{ext}} = \frac{d\vec{L}}{dt}$$

This expression shows that in the infinitesimal time interval dt , the nonzero torque produces a change in angular momentum $d\vec{L}$, a change that is in the same direction as $\vec{\tau}$. Therefore, like the torque vector, $d\vec{L}$ must also be perpendicular to \vec{L} . Figure 11.14c illustrates the resulting precessional motion of the symmetry axis of the gyroscope. In a time interval dt , the change in angular momentum is $d\vec{L} = \vec{L}_f - \vec{L}_i = \vec{\tau} dt$. Because $d\vec{L}$ is perpendicular to \vec{L} , the magnitude of \vec{L} does not change ($|\vec{L}_i| = |\vec{L}_f|$). Rather, what is changing is the *direction* of \vec{L} . Because the change in angular momentum $d\vec{L}$ is in the direction of $\vec{\tau}$, which lies in the xy plane, the gyroscope undergoes precessional motion.

To simplify the description of the system, we assume the total angular momentum of the precessing wheel is the sum of the angular momentum $I\vec{\omega}$ due to the spinning and the angular momentum due to the motion of the center of mass about the pivot. In our treatment, we shall neglect the contribution from the center-of-mass motion and take the total angular momentum to be simply $I\vec{\omega}$. In practice, this approximation is good if $\vec{\omega}$ is made very large.

The vector diagram in Figure 11.14c shows that in the time interval dt , the angular momentum vector rotates through an angle $d\phi$, which is also the angle through which the gyroscope axle rotates. From the vector triangle formed by the vectors \vec{L}_i , \vec{L}_f , and $d\vec{L}$, we see that

$$d\phi = \frac{dL}{L} = \frac{\sum \tau_{\text{ext}} dt}{L} = \frac{(Mg r_{\text{CM}}) dt}{L}$$

Dividing through by dt and using the relationship $L = I\omega$, we find that the rate at which the axle rotates about the vertical axis is

$$\omega_p = \frac{d\phi}{dt} = \frac{Mg r_{\text{CM}}}{I\omega} \tag{11.20}$$

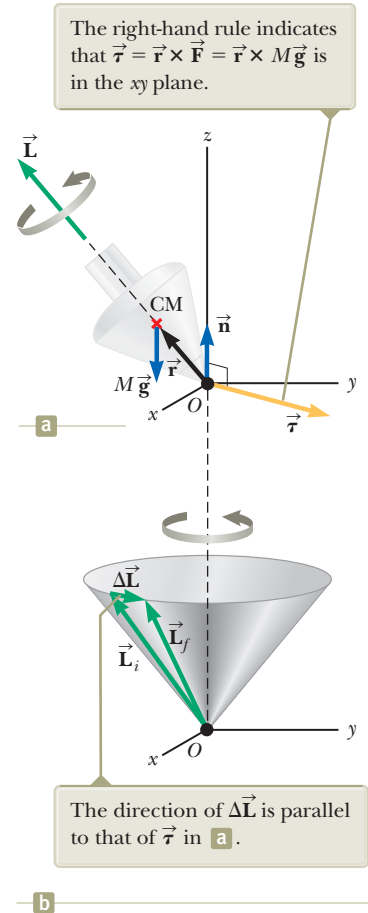


Figure 11.13 Precessional motion of a top spinning about its symmetry axis. (a) The only external forces acting on the top are the normal force \vec{n} and the gravitational force $M\vec{g}$. The direction of the angular momentum \vec{L} is along the axis of symmetry. (b) Because $\vec{L}_f = \Delta\vec{L} + \vec{L}_i$, the top precesses about the z axis.

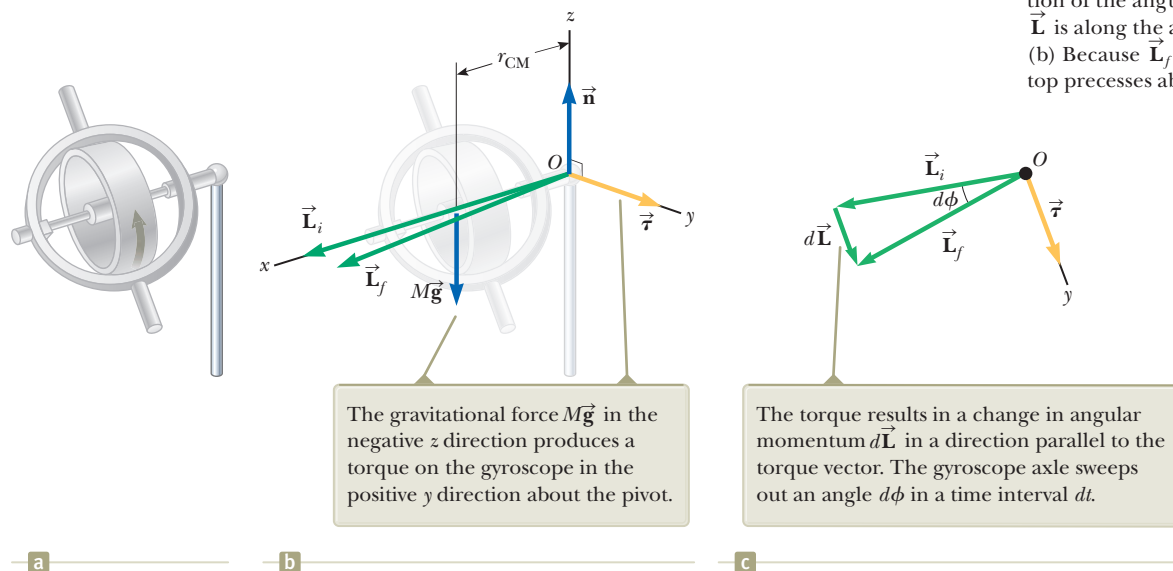


Figure 11.14 (a) A spinning gyroscope is placed on a pivot at the right end. (b) Diagram for the spinning gyroscope showing forces, torque, and angular momentum. (c) Overhead view (looking down the z axis) of the gyroscope's initial and final angular momentum vectors for an infinitesimal time interval dt .




Figure 11.15 (a) A spacecraft carries a gyroscope that is not spinning. (b) The gyroscope is set into rotation.

The angular speed ω_p is called the **precessional frequency**. This result is valid only when $\omega_p \ll \omega$. Otherwise, a much more complicated motion is involved. As you can see from Equation 11.20, the condition $\omega_p \ll \omega$ is met when ω is large, that is, when the wheel spins rapidly. Furthermore, notice that the precessional frequency decreases as ω increases, that is, as the wheel spins faster about its axis of symmetry.

As an example of the usefulness of gyroscopes, suppose you are in a spacecraft in deep space and you need to alter your trajectory. To fire the engines in the correct direction, you need to turn the spacecraft. How, though, do you turn a spacecraft in empty space? One way is to have small rocket engines that fire perpendicularly out the side of the spacecraft, providing a torque around its center of mass. Such a setup is desirable, and many spacecraft have such rockets.

Let us consider another method, however, that does not require the consumption of rocket fuel. Suppose the spacecraft carries a gyroscope that is not rotating as in Figure 11.15a. In this case, the angular momentum of the spacecraft about its center of mass is zero. Suppose the gyroscope is set into rotation, giving the gyroscope a nonzero angular momentum. There is no external torque on the isolated system (spacecraft and gyroscope), so the angular momentum of this system must remain zero according to the isolated system (angular momentum) model. The zero value can be satisfied if the spacecraft rotates in the direction opposite that of the gyroscope so that the angular momentum vectors of the gyroscope and the spacecraft cancel, resulting in no angular momentum of the system. The result of rotating the gyroscope, as in Figure 11.15b, is that the spacecraft turns around! By including three gyroscopes with mutually perpendicular axes, any desired rotation in space can be achieved.

This effect created an undesirable situation with the *Voyager 2* spacecraft during its flight. The spacecraft carried a tape recorder whose reels rotated at high speeds. Each time the tape recorder was turned on, the reels acted as gyroscopes and the spacecraft started an undesirable rotation in the opposite direction. This rotation had to be counteracted by Mission Control by using the sideward-firing jets to *stop* the rotation!

Summary

Definitions

Given two vectors \vec{A} and \vec{B} , the **vector product** $\vec{A} \times \vec{B}$ is a vector \vec{C} having a magnitude

$$C = AB \sin \theta \quad (11.3)$$

where θ is the angle between \vec{A} and \vec{B} . The direction of the vector $\vec{C} = \vec{A} \times \vec{B}$ is perpendicular to the plane formed by \vec{A} and \vec{B} , and this direction is determined by the right-hand rule.

The **torque** $\vec{\tau}$ on a particle due to a force \vec{F} about an axis through the origin in an inertial frame is defined to be

$$\vec{\tau} \equiv \vec{r} \times \vec{F} \quad (11.1)$$

The **angular momentum** \vec{L} about an axis through the origin of a particle having linear momentum $\vec{p} = m\vec{v}$ is

$$\vec{L} \equiv \vec{r} \times \vec{p} \quad (11.10)$$

where \vec{r} is the vector position of the particle relative to the origin.

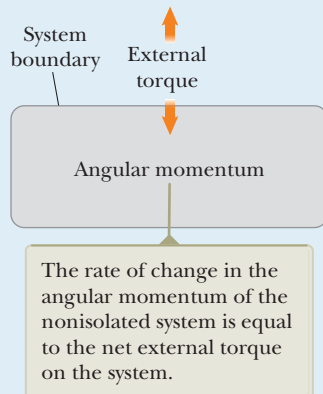
Concepts and Principles

- The z component of angular momentum of a rigid object rotating about a fixed z axis is

$$L_z = I\omega \quad (11.14)$$

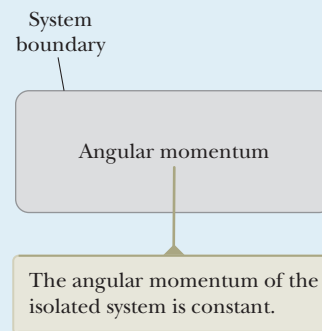
where I is the moment of inertia of the object about the axis of rotation and ω is its angular speed.

Analysis Models for Problem Solving



- Nonisolated System (Angular Momentum).** If a system interacts with its environment in the sense that there is an external torque on the system, the net external torque acting on a system is equal to the time rate of change of its angular momentum:

$$\sum \vec{\tau}_{\text{ext}} = \frac{d\vec{L}_{\text{tot}}}{dt} \quad (11.13)$$



- Isolated System (Angular Momentum).** If a system experiences no external torque from the environment, the total angular momentum of the system is conserved:

$$\Delta \vec{L}_{\text{tot}} = 0 \quad (11.18)$$

Applying this law of conservation of angular momentum to a system whose moment of inertia changes gives

$$I_i \omega_i = I_f \omega_f = \text{constant} \quad (11.19)$$

Objective Questions

1. denotes answer available in *Student Solutions Manual/Study Guide*

- An ice skater starts a spin with her arms stretched out to the sides. She balances on the tip of one skate to turn without friction. She then pulls her arms in so that her moment of inertia decreases by a factor of 2. In the process of her doing so, what happens to her kinetic energy? (a) It increases by a factor of 4. (b) It increases by a factor of 2. (c) It remains constant. (d) It decreases by a factor of 2. (e) It decreases by a factor of 4.
- A pet mouse sleeps near the eastern edge of a stationary, horizontal turntable that is supported by a frictionless, vertical axle through its center. The mouse wakes up and starts to walk north on the turntable. (i) As it takes its first steps, what is the direction of the mouse's displacement relative to the stationary ground below? (a) north (b) south (c) no displacement. (ii) In this process, the spot on the turntable where the mouse had been snoozing undergoes a displacement in what direction relative to the ground below? (a) north (b) south (c) no displacement. Answer yes or no for the

following questions. (iii) In this process, is the mechanical energy of the mouse–turntable system constant? (iv) Is the momentum of the system constant? (v) Is the angular momentum of the system constant?


- Let us name three perpendicular directions as right, up, and toward you as you might name them when you are facing a television screen that lies in a vertical plane. Unit vectors for these directions are \hat{r} , \hat{u} , and \hat{t} , respectively. Consider the quantity $(-3\hat{u} \times 2\hat{t})$. (i) Is the magnitude of this vector (a) 6, (b) 3, (c) 2, or (d) 0? (ii) Is the direction of this vector (a) down, (b) toward you, (c) up, (d) away from you, or (e) left?
- Let the four compass directions north, east, south, and west be represented by unit vectors \hat{n} , \hat{e} , \hat{s} , and \hat{w} , respectively. Vertically up and down are represented as \hat{u} and \hat{d} . Let us also identify unit vectors that are half-way between these directions such as \hat{ne} for northeast. Rank the magnitudes of the following cross products from largest to smallest. If any are equal in magnitude

- or are equal to zero, show that in your ranking, (a) $\hat{n} \times \hat{n}$ (b) $\hat{w} \times \hat{n}\hat{e}$ (c) $\hat{u} \times \hat{n}\hat{e}$ (d) $\hat{n} \times \hat{n}\hat{w}$ (e) $\hat{n} \times \hat{e}$
- Answer yes or no to the following questions. (a) Is it possible to calculate the torque acting on a rigid object without specifying an axis of rotation? (b) Is the torque independent of the location of the axis of rotation?
 - Vector \vec{A} is in the negative y direction, and vector \vec{B} is in the negative x direction. (i) What is the direction of $\vec{A} \times \vec{B}$? (a) no direction because it is a scalar (b) x (c) $-y$ (d) z (e) $-z$ (ii) What is the direction of $\vec{B} \times \vec{A}$? Choose from the same possibilities (a) through (e).
 - Two ponies of equal mass are initially at diametrically opposite points on the rim of a large horizontal turntable that is turning freely on a frictionless, vertical axle through its center. The ponies simultaneously start walking toward each other across the turntable. (i) As they walk, what happens to the angular speed of the turntable? (a) It increases. (b) It decreases. (c) It stays constant. Consider the ponies–turntable system in this process and answer yes or no for the following questions. (ii) Is the mechanical energy of the system conserved? (iii) Is the momentum of the system conserved? (iv) Is the angular momentum of the system conserved?
 - Consider an isolated system moving through empty space. The system consists of objects that interact with each other and can change location with respect to one another. Which of the following quantities can change in time? (a) The angular momentum of the system. (b) The linear momentum of the system. (c) Both the angular momentum and linear momentum of the system. (d) Neither the angular momentum nor linear momentum of the system.

Conceptual Questions

1. denotes answer available in *Student Solutions Manual/Study Guide*

- Stars originate as large bodies of slowly rotating gas. Because of gravity, these clumps of gas slowly decrease in size. What happens to the angular speed of a star as it shrinks? Explain.
- A scientist arriving at a hotel asks a bellhop to carry a heavy suitcase. When the bellhop rounds a corner, the suitcase suddenly swings away from him for some unknown reason. The alarmed bellhop drops the suitcase and runs away. What might be in the suitcase?
- Why does a long pole help a tightrope walker stay balanced?
- Two children are playing with a roll of paper towels. One child holds the roll between the index fingers of her hands so that it is free to rotate, and the second child pulls at constant speed on the free end of the paper towels. As the child pulls the paper towels, the radius of the roll of remaining towels decreases. (a) How does the torque on the roll change with time? (b) How does the angular speed of the roll change in time? (c) If the child suddenly jerks the end paper towel with a large force, is the towel more likely to break from the others when it is being pulled from a nearly full roll or from a nearly empty roll?
- Both torque and work are products of force and displacement. How are they different? Do they have the same units?
- In some motorcycle races, the riders drive over small hills and the motorcycle becomes airborne for a short time interval. If the motorcycle racer keeps the throttle open while leaving the hill and going into the air, the motorcycle tends to nose upward. Why?
- If the torque acting on a particle about an axis through a certain origin is zero, what can you say about its angular momentum about that axis?
- A ball is thrown in such a way that it does not spin about its own axis. Does this statement imply that the angular momentum is zero about an arbitrary axis? Explain.
- If global warming continues over the next one hundred years, it is likely that some polar ice will melt and the water will be distributed closer to the equator. (a) How would that change the moment of inertia of the Earth? (b) Would the duration of the day (one revolution) increase or decrease?
- A cat usually lands on its feet regardless of the position from which it is dropped. A slow-motion film of a cat falling shows that the upper half of its body twists in one direction while the lower half twists in the opposite direction. (See Fig. CQ11.10.) Why does this type of rotation occur?



Agence Nature/Photo Researchers, Inc.

Figure CQ11.10

- In Chapters 7 and 8, we made use of energy bar charts to analyze physical situations. Why have we not used bar charts for angular momentum in this chapter?

Problems

ENHANCED

WebAssign

The problems found in this chapter may be assigned online in Enhanced WebAssign

1. straightforward; 2. intermediate; 3. challenging

1. full solution available in the *Student Solutions Manual/Study Guide*

AMT

Analysis Model tutorial available in Enhanced WebAssign

GP

Guided Problem

M

Master It tutorial available in Enhanced WebAssign

W

Watch It video solution available in Enhanced WebAssign

Section 11.1 The Vector Product and Torque

1. Given $\vec{M} = 2\hat{i} - 3\hat{j} + \hat{k}$ and $\vec{N} = 4\hat{i} + 5\hat{j} - 2\hat{k}$, calculate the vector product $\vec{M} \times \vec{N}$.

2. The displacement vectors 42.0 cm at 15.0° and 23.0 cm at 65.0° both start from the origin and form two sides of a parallelogram. Both angles are measured counterclockwise from the x axis. (a) Find the area of the parallelogram. (b) Find the length of its longer diagonal.

3. Two vectors are given by $\vec{A} = \hat{i} + 2\hat{j}$ and $\vec{B} = -2\hat{i} + 3\hat{j}$.

Find (a) $\vec{A} \times \vec{B}$ and (b) the angle between \vec{A} and \vec{B} .

4. Use the definition of the vector product and the definitions of the unit vectors \hat{i} , \hat{j} , and \hat{k} to prove Equations 11.7. You may assume the x axis points to the right, the y axis up, and the z axis horizontally toward you (not away from you). This choice is said to make the coordinate system a *right-handed system*.

5. Calculate the net torque (magnitude and direction) on the beam in Figure P11.5 about (a) an axis through O perpendicular to the page and (b) an axis through C perpendicular to the page.

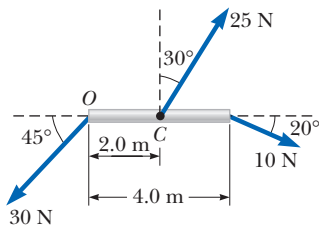


Figure P11.5

6. Two vectors are given by these expressions: $\vec{A} = -3\hat{i} + 7\hat{j} - 4\hat{k}$ and $\vec{B} = 6\hat{i} - 10\hat{j} + 9\hat{k}$. Evaluate the quantities (a) $\cos^{-1}[\vec{A} \cdot \vec{B}/AB]$ and (b) $\sin^{-1}[|\vec{A} \times \vec{B}|/AB]$. (c) Which give(s) the angle between the vectors?

7. If $|\vec{A} \times \vec{B}| = \vec{A} \cdot \vec{B}$, what is the angle between \vec{A} and \vec{B} ?

8. A particle is located at the vector position $\vec{r} = (4.00\hat{i} + 6.00\hat{j})$ m, and a force exerted on it is given by $\vec{F} = (3.00\hat{i} + 2.00\hat{j})$ N. (a) What is the torque acting on the particle about the origin? (b) Can there be another point about which the torque caused by this force on this particle will be in the opposite direction and half as large in magnitude? (c) Can there be more than one such point? (d) Can such a point lie on the y axis? (e) Can more than one such point lie on the y axis? (f) Determine the position vector of one such point.

9. Two forces \vec{F}_1 and \vec{F}_2 act along the two sides of an equilateral triangle as shown in Figure P11.9. Point O is the intersection of the altitudes of the triangle. (a) Find a third force \vec{F}_3 to be applied at B and along BC that will make the total torque zero about the point O . (b) **What If?** Will the total torque change if \vec{F}_3 is applied not at B but at any other point along BC ?

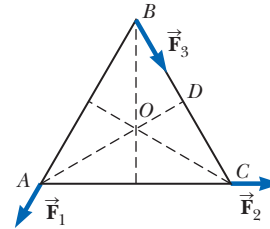


Figure P11.9

10. A student claims that he has found a vector \vec{A} such that $(2\hat{i} - 3\hat{j} + 4\hat{k}) \times \vec{A} = (4\hat{i} + 3\hat{j} - \hat{k})$. (a) Do you believe this claim? (b) Explain why or why not.

Section 11.2 Analysis Model: Nonisolated System (Angular Momentum)

11. A light, rigid rod of length $\ell = 1.00$ m joins two particles, with masses $m_1 = 4.00$ kg and $m_2 = 3.00$ kg, at its ends. The combination rotates in the xy plane about a pivot through the center of the rod (Fig. P11.11). Determine the angular momentum of the system about the origin when the speed of each particle is 5.00 m/s.

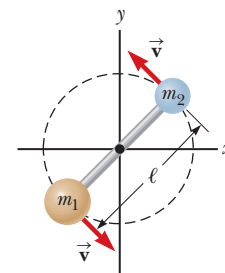


Figure P11.11

12. A 1.50-kg particle moves in the xy plane with a velocity of $\vec{v} = (4.20\hat{i} - 3.60\hat{j})$ m/s. Determine the angular momentum of the particle about the origin when its position vector is $\vec{r} = (1.50\hat{i} + 2.20\hat{j})$ m.
13. A particle of mass m moves in the xy plane with a velocity of $\vec{v} = v_x\hat{i} + v_y\hat{j}$. Determine the angular momentum

of the particle about the origin when its position vector is $\vec{r} = x\hat{i} + y\hat{j}$.

14. Heading straight toward the summit of Pike's Peak, an airplane of mass 12 000 kg flies over the plains of Kansas at nearly constant altitude 4.30 km with constant velocity 175 m/s west. (a) What is the airplane's vector angular momentum relative to a wheat farmer on the ground directly below the airplane? (b) Does this value change as the airplane continues its motion along a straight line? (c) **What If?** What is its angular momentum relative to the summit of Pike's Peak?

15. **Review.** A projectile of mass m is launched with an initial velocity \vec{v}_i making an angle θ with the horizontal as shown in Figure P11.15. The projectile moves in the gravitational field of the Earth. Find the angular momentum of the projectile about the origin (a) when the projectile is at the origin, (b) when it is at the highest point of its trajectory, and (c) just before it hits the ground. (d) What torque causes its angular momentum to change?

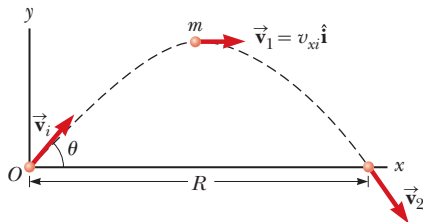


Figure P11.15

16. **Review.** A conical pendulum consists of a bob of mass m in motion in a circular path in a horizontal plane as shown in Figure P11.16. During the motion, the supporting wire of length ℓ maintains a constant angle θ with the vertical. Show that the magnitude of the angular momentum of the bob about the vertical dashed line is

$$L = \left(\frac{m^2 g \ell^3 \sin^4 \theta}{\cos \theta} \right)^{1/2}$$

17. A particle of mass m moves in a circle of radius R at a constant speed v as shown in Figure P11.17. The motion begins at point Q at time $t = 0$. Determine the angular momentum of the particle about the axis perpendicular to the page through point P as a function of time.

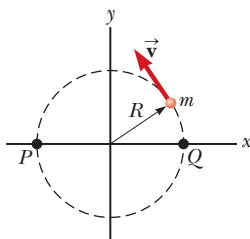


Figure P11.17 Problems 17 and 32.

18. A counterweight of mass $m = 4.00$ kg is attached to a light cord that is wound around a pulley as in Figure P11.18. The pulley is a thin hoop of radius $R = 8.00$ cm and mass $M = 2.00$ kg. The spokes have negligible mass. (a) What is the magnitude of the net torque on the system about the axle of the pulley? (b) When the counterweight has a speed v , the pulley has an angular speed $\omega = v/R$. Determine the magnitude of the total angular momentum of the system about the axle of the pulley. (c) Using your result from part (b) and $\vec{\tau} = d\vec{L}/dt$, calculate the acceleration of the counterweight.

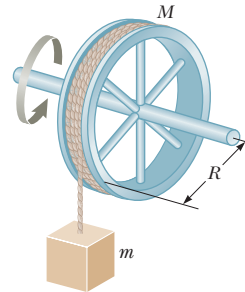


Figure P11.18

19. **M** The position vector of a particle of mass 2.00 kg as a function of time is given by $\vec{r} = (6.00\hat{i} + 5.00t\hat{j})$, where \vec{r} is in meters and t is in seconds. Determine the angular momentum of the particle about the origin as a function of time.
20. A 5.00-kg particle starts from the origin at time zero. Its velocity as a function of time is given by

$$\vec{v} = 6t^2\hat{i} + 2t\hat{j}$$

where \vec{v} is in meters per second and t is in seconds. (a) Find its position as a function of time. (b) Describe its motion qualitatively. Find (c) its acceleration as a function of time, (d) the net force exerted on the particle as a function of time, (e) the net torque about the origin exerted on the particle as a function of time, (f) the angular momentum of the particle as a function of time, (g) the kinetic energy of the particle as a function of time, and (h) the power injected into the system of the particle as a function of time.

21. A ball having mass m is fastened at the end of a flagpole that is connected to the side of a tall building at point P as shown in Figure P11.21. The length of the flagpole is ℓ , and it makes an angle θ with the x axis. The ball becomes loose and starts to fall with acceleration $-g\hat{j}$. (a) Determine the angular momentum of the ball about point P as a function of time. (b) For what physical reason does the angular momentum change? (c) What is the rate of change of the angular momentum of the ball about point P ?

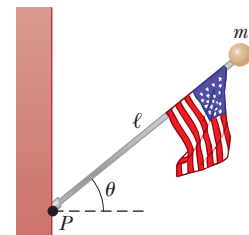


Figure P11.21

Section 11.3 Angular Momentum of a Rotating Rigid Object

22. A uniform solid sphere of radius $r = 0.500$ m and mass $m = 15.0$ kg turns counterclockwise about a vertical axis through its center. Find its vector angular momentum about this axis when its angular speed is 3.00 rad/s.
23. Big Ben (Fig. P10.49, page 328), the Parliament tower clock in London, has hour and minute hands with lengths of 2.70 m and 4.50 m and masses of 60.0 kg and 100 kg, respectively. Calculate the total angular momentum of these hands about the center point. (You may model the hands as long, thin rods rotating about one end. Assume the hour and minute hands are rotating at a constant rate of one revolution per 12 hours and 60 minutes, respectively.)
24. Show that the kinetic energy of an object rotating about a fixed axis with angular momentum $L = I\omega$ can be written as $K = L^2/2I$.
25. A uniform solid disk of mass $m = 3.00$ kg and radius $r = 0.200$ m rotates about a fixed axis perpendicular to its face with angular frequency 6.00 rad/s. Calculate the magnitude of the angular momentum of the disk when the axis of rotation (a) passes through its center of mass and (b) passes through a point midway between the center and the rim.
26. Model the Earth as a uniform sphere. (a) Calculate the angular momentum of the Earth due to its spinning motion about its axis. (b) Calculate the angular momentum of the Earth due to its orbital motion about the Sun. (c) Explain why the answer in part (b) is larger than that in part (a) even though it takes significantly longer for the Earth to go once around the Sun than to rotate once about its axis.
27. A particle of mass 0.400 kg is attached to the 100 -cm mark of a meterstick of mass 0.100 kg. The meterstick rotates on the surface of a frictionless, horizontal table with an angular speed of 4.00 rad/s. Calculate the angular momentum of the system when the stick is pivoted about an axis (a) perpendicular to the table through the 50.0 -cm mark and (b) perpendicular to the table through the 0 -cm mark.

28. The distance between the centers of the wheels of a motorcycle is 155 cm. The center of mass of the motorcycle, including the rider, is 88.0 cm above the ground and halfway between the wheels. Assume the mass of each wheel is small compared with the body of the motorcycle. The engine drives the rear wheel only. What horizontal acceleration of the motorcycle will make the front wheel rise off the ground?

29. A space station is constructed in the shape of a hollow ring of mass 5.00×10^4 kg. Members of the crew walk on a deck formed by the inner surface of the outer cylindrical wall of the ring, with radius $r = 100$ m. At rest when constructed, the ring is set rotating about its axis so that the people inside experience an effective free-fall acceleration equal to g . (See Fig. P11.29.) The rotation is achieved by firing two small rockets attached tangentially to opposite points on the rim of

the ring. (a) What angular momentum does the space station acquire? (b) For what time interval must the rockets be fired if each exerts a thrust of 125 N?

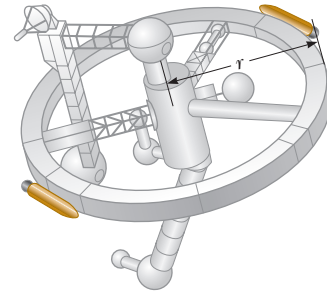


Figure P11.29 Problems 29 and 40.

Section 11.4 Analysis Model: Isolated System (Angular Momentum)

30. A disk with moment of inertia I_1 rotates about a frictionless, vertical axle with angular speed ω_i . A second disk, this one having moment of inertia I_2 and initially not rotating, drops onto the first disk (Fig. P11.30). Because of friction between the surfaces, the two eventually reach the same angular speed ω_f . (a) Calculate ω_f . (b) Calculate the ratio of the final to the initial rotational energy.

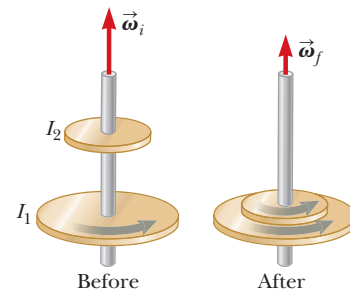


Figure P11.30

31. A playground merry-go-round of radius $R = 2.00$ m has a moment of inertia $I = 250$ kg \cdot m² and is rotating at 10.0 rev/min about a frictionless, vertical axle. Facing the axle, a 25.0 -kg child hops onto the merry-go-round and manages to sit down on the edge. What is the new angular speed of the merry-go-round?
32. Figure P11.17 represents a small, flat puck with mass $m = 2.40$ kg sliding on a frictionless, horizontal surface. It is held in a circular orbit about a fixed axis by a rod with negligible mass and length $R = 1.50$ m, pivoted at one end. Initially, the puck has a speed of $v = 5.00$ m/s. A 1.30 -kg ball of putty is dropped vertically onto the puck from a small distance above it and immediately sticks to the puck. (a) What is the new period of rotation? (b) Is the angular momentum of the puck-putty system about the axis of rotation constant in this process? (c) Is the momentum of the system constant in the process of the putty sticking to the puck? (d) Is the mechanical energy of the system constant in the process?

- 33.** A 60.0-kg woman stands at the western rim of a horizontal turntable having a moment of inertia of $500 \text{ kg} \cdot \text{m}^2$ and a radius of 2.00 m. The turntable is initially at rest and is free to rotate about a frictionless, vertical axle through its center. The woman then starts walking around the rim clockwise (as viewed from above the system) at a constant speed of 1.50 m/s relative to the Earth. Consider the woman–turntable system as motion begins. (a) Is the mechanical energy of the system constant? (b) Is the momentum of the system constant? (c) Is the angular momentum of the system constant? (d) In what direction and with what angular speed does the turntable rotate? (e) How much chemical energy does the woman's body convert into mechanical energy of the woman–turntable system as the woman sets herself and the turntable into motion?

- 34.** A student sits on a freely rotating stool holding two dumbbells, each of mass 3.00 kg (Fig. P11.34). When his arms are extended horizontally (Fig. P11.34a), the dumbbells are 1.00 m from the axis of rotation and the student rotates with an angular speed of 0.750 rad/s. The moment of inertia of the student plus stool is $3.00 \text{ kg} \cdot \text{m}^2$ and is assumed to be constant. The student pulls the dumbbells inward horizontally to a position 0.300 m from the rotation axis (Fig. P11.34b). (a) Find the new angular speed of the student. (b) Find the kinetic energy of the rotating system before and after he pulls the dumbbells inward.

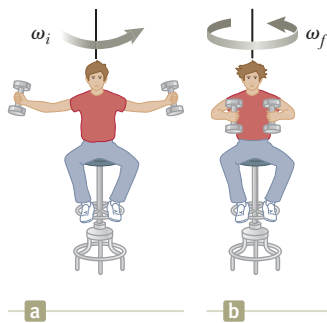


Figure P11.34

- 35.** A uniform cylindrical turntable of radius 1.90 m and mass 30.0 kg rotates counterclockwise in a horizontal plane with an initial angular speed of $4\pi \text{ rad/s}$. The fixed turntable bearing is frictionless. A lump of clay of mass 2.25 kg and negligible size is dropped onto the turntable from a small distance above it and immediately sticks to the turntable at a point 1.80 m to the east of the axis. (a) Find the final angular speed of the clay and turntable. (b) Is the mechanical energy of the turntable–clay system constant in this process? Explain and use numerical results to verify your answer. (c) Is the momentum of the system constant in this process? Explain your answer.
- 36.** A puck of mass $m_1 = 80.0 \text{ g}$ and radius $r_1 = 4.00 \text{ cm}$ glides across an air table at a speed of $\vec{v} = 1.50 \text{ m/s}$ as shown in Figure P11.36a. It makes a glancing collision with a second puck of radius $r_2 = 6.00 \text{ cm}$ and mass $m_2 = 120 \text{ g}$ (initially at rest) such that their rims just touch. Because their rims are coated with instant-acting glue,

the pucks stick together and rotate after the collision (Fig. P11.36b). (a) What is the angular momentum of the system relative to the center of mass? (b) What is the angular speed about the center of mass?

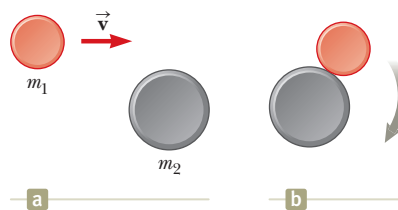


Figure P11.36

- 37.** A wooden block of mass M resting on a frictionless, horizontal surface is attached to a rigid rod of length ℓ and of negligible mass (Fig. P11.37). The rod is pivoted at the other end. A bullet of mass m traveling parallel to the horizontal surface and perpendicular to the rod with speed v hits the block and becomes embedded in it. (a) What is the angular momentum of the bullet–block system about a vertical axis through the pivot? (b) What fraction of the original kinetic energy of the bullet is converted into internal energy in the system during the collision?

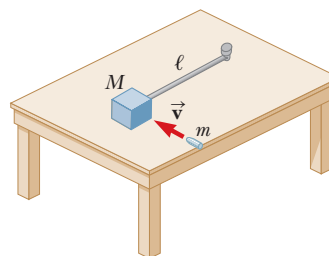


Figure P11.37

- 38. Review.** A thin, uniform, rectangular signboard hangs vertically above the door of a shop. The sign is hinged to a stationary horizontal rod along its top edge. The mass of the sign is 2.40 kg, and its vertical dimension is 50.0 cm. The sign is swinging without friction, so it is a tempting target for children armed with snowballs. The maximum angular displacement of the sign is 25.0° on both sides of the vertical. At a moment when the sign is vertical and moving to the left, a snowball of mass 400 g, traveling horizontally with a velocity of 160 cm/s to the right, strikes perpendicularly at the lower edge of the sign and sticks there. (a) Calculate the angular speed of the sign immediately before the impact. (b) Calculate its angular speed immediately after the impact. (c) The spattered sign will swing up through what maximum angle?
- 39.** A wad of sticky clay with mass m and velocity \vec{v}_i is fired at a solid cylinder of mass M and radius R (Fig. P11.39). The cylinder is initially at rest and is mounted on a fixed horizontal axle that runs through its center of mass. The line of motion of the projectile is perpendicular to the axle and at a distance $d < R$ from the center. (a) Find the angular speed of the system just after the clay strikes and sticks to the surface of the cylin-

der. (b) Is the mechanical energy of the clay–cylinder system constant in this process? Explain your answer. (c) Is the momentum of the clay–cylinder system constant in this process? Explain your answer.

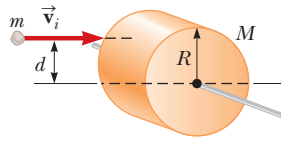


Figure P11.39

40. Why is the following situation impossible? A space station shaped like a giant wheel has a radius of $r = 100$ m and a moment of inertia of $5.00 \times 10^8 \text{ kg} \cdot \text{m}^2$. A crew of 150 people of average mass 65.0 kg is living on the rim, and the station's rotation causes the crew to experience an apparent free-fall acceleration of g (Fig. P11.29). A research technician is assigned to perform an experiment in which a ball is dropped at the rim of the station every 15 minutes and the time interval for the ball to drop a given distance is measured as a test to make sure the apparent value of g is correctly maintained. One evening, 100 average people move to the center of the station for a union meeting. The research technician, who has already been performing his experiment for an hour before the meeting, is disappointed that he cannot attend the meeting, and his mood sours even further by his boring experiment in which every time interval for the dropped ball is identical for the entire evening.
41. A 0.00500 -kg bullet traveling horizontally with speed 1.00×10^3 m/s strikes an 18.0 -kg door, embedding itself 10.0 cm from the side opposite the hinges as shown in Figure P11.41. The 1.00 -m wide door is free to swing on its frictionless hinges. (a) Before it hits the door, does the bullet have angular momentum relative to the door's axis of rotation? (b) If so, evaluate this angular momentum. If not, explain why there is no angular momentum. (c) Is the mechanical energy of the bullet–door system constant during this collision? Answer without doing a calculation. (d) At what angular speed does the door swing open immediately after the collision? (e) Calculate the total energy of the bullet–door system and determine whether it is less than or equal to the kinetic energy of the bullet before the collision.

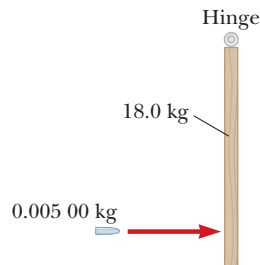


Figure P11.41 An overhead view of a bullet striking a door.

Section 11.5 The Motion of Gyroscopes and Tops

42. A spacecraft is in empty space. It carries on board a gyroscope with a moment of inertia of $I_g = 20.0 \text{ kg} \cdot \text{m}^2$ about the axis of the gyroscope. The moment of inertia

of the spacecraft around the same axis is $I_s = 5.00 \times 10^5 \text{ kg} \cdot \text{m}^2$. Neither the spacecraft nor the gyroscope is originally rotating. The gyroscope can be powered up in a negligible period of time to an angular speed of 100 rad/s . If the orientation of the spacecraft is to be changed by 30.0° , for what time interval should the gyroscope be operated?

43. The angular momentum vector of a precessing gyroscope sweeps out a cone as shown in Figure P11.43. The angular speed of the tip of the angular momentum vector, called its precessional frequency, is given by $\omega_p = \tau/L$, where τ is the magnitude of the torque on the gyroscope and L is the magnitude of its angular momentum. In the motion called *precession of the equinoxes*, the Earth's axis of rotation precesses about the perpendicular to its orbital plane with a period of 2.58×10^4 yr. Model the Earth as a uniform sphere and calculate the torque on the Earth that is causing this precession.

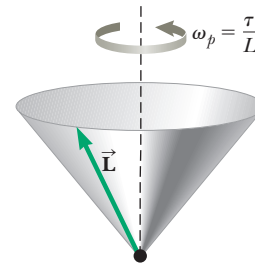


Figure P11.43 A precessing angular momentum vector sweeps out a cone in space.

Additional Problems

44. A light rope passes over a light, frictionless pulley. One end is fastened to a bunch of bananas of mass M , and a monkey of mass M clings to the other end (Fig. P11.44). The monkey climbs the rope in an attempt to reach the bananas. (a) Treating the system as consisting of the monkey, bananas, rope, and pulley, find the net torque on the system about the pulley axis. (b) Using the result of part (a), determine the total angular momentum about the pulley axis and describe the motion of the system. (c) Will the monkey reach the bananas?
45. Comet Halley moves about the Sun in an elliptical orbit, with its closest approach to the Sun being about 0.590 AU and its greatest distance 35.0 AU ($1 \text{ AU} =$ the Earth–Sun distance). The angular momentum of the comet about the Sun is constant, and the gravitational force exerted by the Sun has zero moment arm. The comet's speed at closest approach is 54.0 km/s . What is its speed when it is farthest from the Sun?
46. **Review.** Two boys are sliding toward each other on a frictionless, ice-covered parking lot. Jacob, mass 45.0 kg, is gliding to the right at 8.00 m/s , and Ethan, mass 31.0 kg, is gliding to the left at 11.0 m/s along the same




Figure P11.44

line. When they meet, they grab each other and hang on. (a) What is their velocity immediately thereafter? (b) What fraction of their original kinetic energy is still mechanical energy after their collision? That was so much fun that the boys repeat the collision with the same original velocities, this time moving along parallel lines 1.20 m apart. At closest approach, they lock arms and start rotating about their common center of mass. Model the boys as particles and their arms as a cord that does not stretch. (c) Find the velocity of their center of mass. (d) Find their angular speed. (e) What fraction of their original kinetic energy is still mechanical energy after they link arms? (f) Why are the answers to parts (b) and (e) so different?

47. We have all complained that there aren't enough hours in a day. In an attempt to fix that, suppose all the people in the world line up at the equator and all start running east at 2.50 m/s relative to the surface of the Earth. By how much does the length of a day increase? Assume the world population to be 7.00×10^9 people with an average mass of 55.0 kg each and the Earth to be a solid homogeneous sphere. In addition, depending on the details of your solution, you may need to use the approximation $1/(1-x) \approx 1+x$ for small x .

48. A skateboarder with his board can be modeled as a particle of mass 76.0 kg, located at his center of mass, 0.500 m above the ground. As shown in Figure P11.48, the skateboarder starts from rest in a crouching position at one lip of a half-pipe (point A). The half-pipe forms one half of a cylinder of radius 6.80 m with its axis horizontal. On his descent, the skateboarder moves without friction and maintains his crouch so that his center of mass moves through one quarter of a circle. (a) Find his speed at the bottom of the half-pipe (point B). (b) Find his angular momentum about the center of curvature at this point. (c) Immediately after passing point B, he stands up and raises his arms, lifting his center of gravity to 0.950 m above the concrete (point C). Explain why his angular momentum is constant in this maneuver, whereas the kinetic energy of his body is not constant. (d) Find his speed immediately after he stands up. (e) How much chemical energy in the skateboarder's legs was converted into mechanical energy in the skateboarder-Earth system when he stood up?

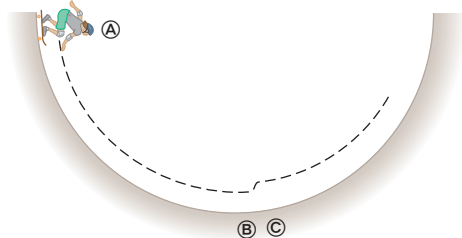


Figure P11.48

49. A rigid, massless rod has three particles with equal masses attached to it as shown in Figure P11.49. The rod is free to rotate in a vertical plane about a frictionless axle perpendicular to the rod through the point P and is released from rest in the horizontal position at $t = 0$.

Assuming m and d are known, find (a) the moment of inertia of the system of three particles about the pivot, (b) the torque acting on the system at $t = 0$, (c) the angular acceleration of the system at $t = 0$, (d) the linear acceleration of the particle labeled 3 at $t = 0$, (e) the maximum kinetic energy of the system, (f) the maximum angular speed reached by the rod, (g) the maximum angular momentum of the system, and (h) the maximum speed reached by the particle labeled 2.

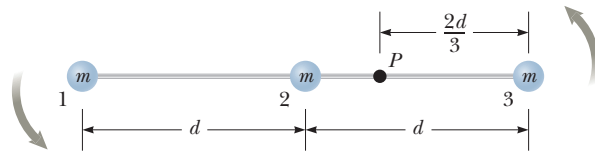


Figure P11.49

50. Two children are playing on stools at a restaurant counter. Their feet do not reach the footrests, and the tops of the stools are free to rotate without friction on pedestals fixed to the floor. One of the children catches a tossed ball, in a process described by the equation

$$(0.730 \text{ kg} \cdot \text{m}^2)(2.40 \hat{j} \text{ rad/s}) + (0.120 \text{ kg})(0.350 \hat{i} \text{ m}) \times (4.30 \hat{k} \text{ m/s}) = [0.730 \text{ kg} \cdot \text{m}^2 + (0.120 \text{ kg})(0.350 \text{ m})^2] \vec{\omega}$$

- (a) Solve the equation for the unknown $\vec{\omega}$. (b) Complete the statement of the problem to which this equation applies. Your statement must include the given numerical information and specification of the unknown to be determined. (c) Could the equation equally well describe the other child throwing the ball? Explain your answer.

51. A projectile of mass m moves to the right with a speed v_i (Fig. P11.51a). The projectile strikes and sticks to the end of a stationary rod of mass M , length d , pivoted about a frictionless axle perpendicular to the page through O (Fig. P11.51b). We wish to find the fractional change of kinetic energy in the system due to the collision. (a) What is the appropriate analysis model to describe the projectile and the rod? (b) What is the angular momentum of the system before the collision about an axis through O ? (c) What is the moment of inertia of the system about an axis through O after the projectile sticks to the rod? (d) If the angular speed of the system after the collision is ω , what is the angular momentum of the system after the collision? (e) Find the angular speed ω after the collision in terms of the given quanti-

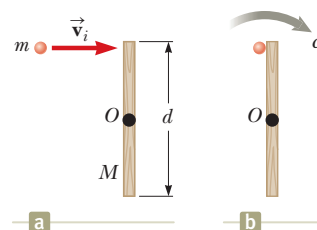


Figure P11.51

ties. (f) What is the kinetic energy of the system before the collision? (g) What is the kinetic energy of the system after the collision? (h) Determine the fractional change of kinetic energy due to the collision.

- 52.** A puck of mass $m = 50.0$ g is attached to a taut cord passing through a small hole in a frictionless, horizontal surface (Fig. P11.52). The puck is initially orbiting with speed $v_i = 1.50$ m/s in a circle of radius $r_i = 0.300$ m. The cord is then slowly pulled from below, decreasing the radius of the circle to $r = 0.100$ m. (a) What is the puck's speed at the smaller radius? (b) Find the tension in the cord at the smaller radius. (c) How much work is done by the hand in pulling the cord so that the radius of the puck's motion changes from 0.300 m to 0.100 m?

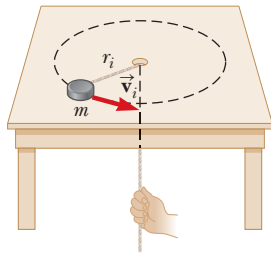


Figure P11.52 Problems 52 and 53.

- 53.** A puck of mass m is attached to a taut cord passing through a small hole in a frictionless, horizontal surface (Fig. P11.52). The puck is initially orbiting with speed v_i in a circle of radius r_i . The cord is then slowly pulled from below, decreasing the radius of the circle to r . (a) What is the puck's speed when the radius is r ? (b) Find the tension in the cord as a function of r . (c) How much work is done by the hand in pulling the cord so that the radius of the puck's motion changes from r_i to r ?
- 54.** Why is the following situation impossible? A meteoroid strikes the Earth directly on the equator. At the time it lands, it is traveling exactly vertical and downward. Due to the impact, the time for the Earth to rotate once increases by 0.5 s, so the day is 0.5 s longer, undetectable to laypersons. After the impact, people on the Earth ignore the extra half-second each day and life goes on as normal. (Assume the density of the Earth is uniform.)

- 55.** Two astronauts (Fig. P11.55), each having a mass of 75.0 kg, are connected by a 10.0-m rope of negligible mass. They are isolated in space, orbiting their center

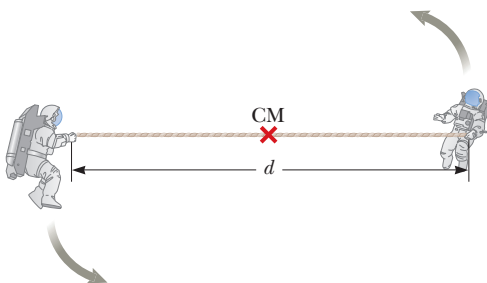


Figure P11.55 Problems 55 and 56.

of mass at speeds of 5.00 m/s. Treating the astronauts as particles, calculate (a) the magnitude of the angular momentum of the two-astronaut system and (b) the rotational energy of the system. By pulling on the rope, one astronaut shortens the distance between them to 5.00 m. (c) What is the new angular momentum of the system? (d) What are the astronauts' new speeds? (e) What is the new rotational energy of the system? (f) How much chemical potential energy in the body of the astronaut was converted to mechanical energy in the system when he shortened the rope?

- 56.** Two astronauts (Fig. P11.55), each having a mass M , are connected by a rope of length d having negligible mass. They are isolated in space, orbiting their center of mass at speeds v . Treating the astronauts as particles, calculate (a) the magnitude of the angular momentum of the two-astronaut system and (b) the rotational energy of the system. By pulling on the rope, one of the astronauts shortens the distance between them to $d/2$. (c) What is the new angular momentum of the system? (d) What are the astronauts' new speeds? (e) What is the new rotational energy of the system? (f) How much chemical potential energy in the body of the astronaut was converted to mechanical energy in the system when he shortened the rope?

- 57.** Native people throughout North and South America used a *bola* to hunt for birds and animals. A bola can consist of three stones, each with mass m , at the ends of three light cords, each with length ℓ . The other ends of the cords are tied together to form a Y. The hunter holds one stone and swings the other two above his head (Figure P11.57a). Both these stones move together in a horizontal circle of radius 2ℓ with speed v_0 . At a moment when the horizontal component of their velocity is directed toward the quarry, the hunter releases the stone in his hand. As the bola flies through the air, the cords quickly take a stable arrangement with constant 120-degree angles between them (Fig. P11.57b). In the vertical direction, the bola is in free fall. Gravitational forces exerted by the Earth make the junction of the cords move with the downward acceleration \vec{g} . You may ignore the vertical motion as you proceed to describe the horizontal motion of the bola. In terms of m , ℓ , and v_0 , calculate (a) the magnitude of the momentum of the bola at the moment of release and, after release, (b) the horizontal speed of the center of mass of the bola and (c) the angular momentum of the bola about its center of mass. (d) Find the angular speed of the bola about its center of mass after it has settled into its Y shape. Calculate

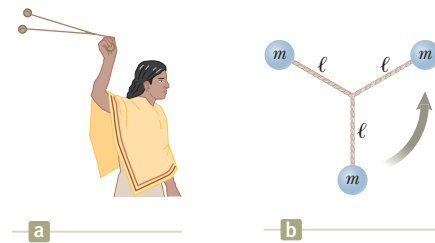


Figure P11.57

the kinetic energy of the bola (e) at the instant of release and (f) in its stable Y shape. (g) Explain how the conservation laws apply to the bola as its configuration changes. Robert Beichner suggested the idea for this problem.

58. A uniform rod of mass 300 g and length 50.0 cm rotates in a horizontal plane about a fixed, frictionless, vertical pin through its center. Two small, dense beads, each of mass m , are mounted on the rod so that they can slide without friction along its length. Initially, the beads are held by catches at positions 10.0 cm on each side of the center and the system is rotating at an angular speed of 36.0 rad/s. The catches are released simultaneously, and the beads slide outward along the rod. (a) Find an expression for the angular speed ω_f of the system at the instant the beads slide off the ends of the rod as it depends on m . (b) What are the maximum and the minimum possible values for ω_f and the values of m to which they correspond?
59. Global warming is a cause for concern because even small changes in the Earth's temperature can have significant consequences. For example, if the Earth's polar ice caps were to melt entirely, the resulting additional water in the oceans would flood many coastal areas. Model the polar ice as having mass 2.30×10^{19} kg and forming two flat disks of radius 6.00×10^5 m. Assume the water spreads into an unbroken thin, spherical shell after it melts. Calculate the resulting change in the duration of one day both in seconds and as a percentage.
60. The puck in Figure P11.60 has a mass of 0.120 kg. The distance of the puck from the center of rotation is originally 40.0 cm, and the puck is sliding with a speed of 80.0 cm/s. The string is pulled downward 15.0 cm through the hole in the frictionless table. Determine the work done on the puck. (*Suggestion:* Consider the change of kinetic energy.)

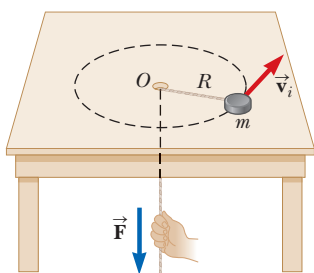


Figure P11.60

Challenge Problems

61. A uniform solid disk of radius R is set into rotation with an angular speed ω_i about an axis through its center. While still rotating at this speed, the disk is placed into contact with a horizontal surface and immediately released as shown in Figure P11.61. (a) What is the angular speed of the disk once pure rolling takes place? (b) Find the fractional change in kinetic energy from the moment the disk is set down until pure

rolling occurs. (c) Assume the coefficient of friction between disk and surface is μ . What is the time interval after setting the disk down before pure rolling motion begins? (d) How far does the disk travel before pure rolling begins?

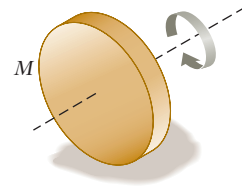


Figure P11.61

62. In Example 11.9, we investigated an elastic collision between a disk and a stick lying on a frictionless surface. Suppose everything is the same as in the example except that the collision is perfectly inelastic so that the disk adheres to the stick at the endpoint at which it strikes. Find (a) the speed of the center of mass of the system and (b) the angular speed of the system after the collision.
63. A solid cube of side $2a$ and mass M is sliding on a frictionless surface with uniform velocity \vec{v} as shown in Figure P11.63a. It hits a small obstacle at the end of the table that causes the cube to tilt as shown in Figure P11.63b. Find the minimum value of the magnitude of \vec{v} such that the cube tips over and falls off the table. *Note:* The cube undergoes an inelastic collision at the edge.

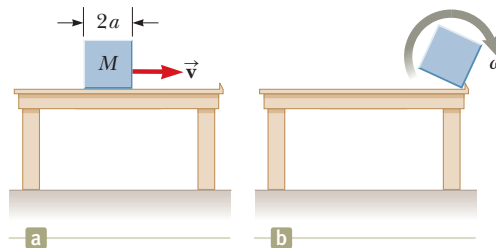


Figure P11.63

64. A solid cube of wood of side $2a$ and mass M is resting on a horizontal surface. The cube is constrained to rotate about a fixed axis AB (Fig. P11.64). A bullet of mass m and speed v is shot at the face opposite $ABCD$ at a height of $4a/3$. The bullet becomes embedded in the cube. Find the minimum value of v required to tip the cube so that it falls on face $ABCD$. Assume $m \ll M$.

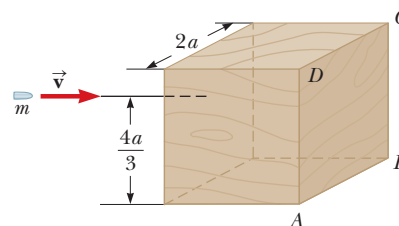



Figure P11.64

Static Equilibrium and Elasticity



- 12.1 Analysis Model: Rigid Object in Equilibrium
- 12.2 More on the Center of Gravity
- 12.3 Examples of Rigid Objects in Static Equilibrium
- 12.4 Elastic Properties of Solids

In Chapters 10 and 11, we studied the dynamics of rigid objects. Part of this chapter addresses the conditions under which a rigid object is in equilibrium. The term *equilibrium* implies that the object moves with both constant velocity and constant angular velocity relative to an observer in an inertial reference frame. We deal here only with the special case in which both of these velocities are equal to zero. In this case, the object is in what is called *static equilibrium*. Static equilibrium represents a common situation in engineering practice, and the principles it involves are of special interest to civil engineers, architects, and mechanical engineers. If you are an engineering student, you will undoubtedly take an advanced course in statics in the near future.

The last section of this chapter deals with how objects deform under load conditions. An *elastic* object returns to its original shape when the deforming forces are removed. Several elastic constants are defined, each corresponding to a different type of deformation.

Balanced Rock in Arches National Park, Utah, is a 3 000 000-kg boulder that has been in stable equilibrium for several millennia. It had a smaller companion nearby, called “Chip Off the Old Block,” that fell during the winter of 1975. Balanced Rock appeared in an early scene of the movie *Indiana Jones and the Last Crusade*. We will study the conditions under which an object is in equilibrium in this chapter. (John W. Jewett, Jr.)

12.1 Analysis Model: Rigid Object in Equilibrium

In Chapter 5, we discussed the particle in equilibrium model, in which a particle moves with constant velocity because the net force acting on it is zero. The situation with real (extended) objects is more complex because these objects often cannot be modeled as particles. For an extended object to be in equilibrium, a second condition must be satisfied. This second condition involves the rotational motion of the extended object.

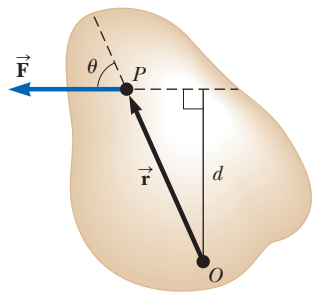


Figure 12.1 A single force \vec{F} acts on a rigid object at the point P .

Pitfall Prevention 12.1

Zero Torque Zero net torque does not mean an absence of rotational motion. An object that is rotating at a constant angular speed can be under the influence of a net torque of zero. This possibility is analogous to the translational situation: zero net force does not mean an absence of translational motion.

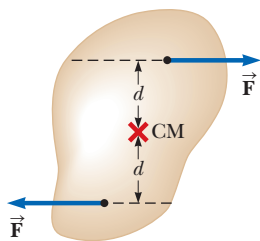


Figure 12.2 (Quick Quiz 12.1) Two forces of equal magnitude are applied at equal distances from the center of mass of a rigid object.

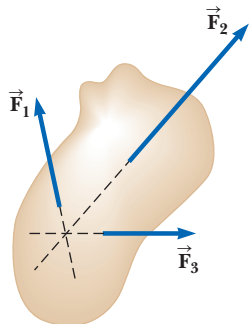


Figure 12.3 (Quick Quiz 12.2) Three forces act on an object. Notice that the lines of action of all three forces pass through a common point.

Consider a single force \vec{F} acting on a rigid object as shown in Figure 12.1. Recall that the torque associated with the force \vec{F} about an axis through O is given by Equation 11.1:

$$\vec{\tau} = \vec{r} \times \vec{F}$$

The magnitude of $\vec{\tau}$ is Fd (see Equation 10.14), where d is the moment arm shown in Figure 12.1. According to Equation 10.18, the net torque on a rigid object causes it to undergo an angular acceleration.

In this discussion, we investigate those rotational situations in which the angular acceleration of a rigid object is zero. Such an object is in **rotational equilibrium**. Because $\Sigma \tau_{\text{ext}} = I\alpha$ for rotation about a fixed axis, the necessary condition for rotational equilibrium is that the net torque about any axis must be zero. We now have two necessary conditions for equilibrium of a rigid object:

1. The net external force on the object must equal zero:

$$\Sigma \vec{F}_{\text{ext}} = 0 \quad (12.1)$$

2. The net external torque on the object about *any* axis must be zero:

$$\Sigma \vec{\tau}_{\text{ext}} = 0 \quad (12.2)$$

These conditions describe the **rigid object in equilibrium** analysis model. The first condition is a statement of translational equilibrium; it states that the translational acceleration of the object's center of mass must be zero when viewed from an inertial reference frame. The second condition is a statement of rotational equilibrium; it states that the angular acceleration about any axis must be zero. In the special case of **static equilibrium**, which is the main subject of this chapter, the object in equilibrium is at rest relative to the observer and so has no translational or angular speed (that is, $v_{\text{CM}} = 0$ and $\omega = 0$).

Quick Quiz 12.1 Consider the object subject to the two forces of equal magnitude in Figure 12.2. Choose the correct statement with regard to this situation. (a) The object is in force equilibrium but not torque equilibrium. (b) The object is in torque equilibrium but not force equilibrium. (c) The object is in both force equilibrium and torque equilibrium. (d) The object is in neither force equilibrium nor torque equilibrium.

Quick Quiz 12.2 Consider the object subject to the three forces in Figure 12.3. Choose the correct statement with regard to this situation. (a) The object is in force equilibrium but not torque equilibrium. (b) The object is in torque equilibrium but not force equilibrium. (c) The object is in both force equilibrium and torque equilibrium. (d) The object is in neither force equilibrium nor torque equilibrium.

The two vector expressions given by Equations 12.1 and 12.2 are equivalent, in general, to six scalar equations: three from the first condition for equilibrium and three from the second (corresponding to x , y , and z components). Hence, in a complex system involving several forces acting in various directions, you could be faced with solving a set of equations with many unknowns. Here, we restrict our discussion to situations in which all the forces lie in the xy plane. (Forces whose vector representations are in the same plane are said to be *coplanar*.) With this restriction, we must deal with only three scalar equations. Two come from balancing the forces in the x and y directions. The third comes from the torque equation, namely that the net torque about a perpendicular axis through *any* point in the xy plane must be zero. This perpendicular axis will necessarily be parallel to

the z axis, so the two conditions of the rigid object in equilibrium model provide the equations

$$\sum F_x = 0 \quad \sum F_y = 0 \quad \sum \tau_z = 0 \tag{12.3}$$

where the location of the axis of the torque equation is arbitrary.

Analysis Model Rigid Object in Equilibrium

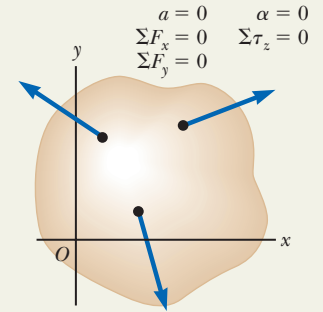
Imagine an object that can rotate, but is exhibiting no translational acceleration a and no rotational acceleration α . Such an object is in both translational *and* rotational equilibrium, so the net force *and* the net torque about any axis are both equal to zero:

$$\sum \vec{F}_{\text{ext}} = 0 \tag{12.1}$$

$$\sum \vec{\tau}_{\text{ext}} = 0 \tag{12.2}$$

Examples:

- a balcony juts out from a building and must support the weight of several humans without collapsing
- a gymnast performs the difficult *iron cross* maneuver in an Olympic event
- a ship moves at constant speed through calm water and maintains a perfectly level orientation (Chapter 14)
- polarized molecules in a dielectric material in a constant electric field take on an average equilibrium orientation that remains fixed in time (Chapter 26)



12.2 More on the Center of Gravity

Whenever we deal with a rigid object, one of the forces we must consider is the gravitational force acting on it, and we must know the point of application of this force. As we learned in Section 9.5, associated with every object is a special point called its center of gravity. The combination of the various gravitational forces acting on all the various mass elements of the object is equivalent to a single gravitational force acting through this point. Therefore, to compute the torque due to the gravitational force on an object of mass M , we need only consider the force $M\vec{g}$ acting at the object's center of gravity.

How do we find this special point? As mentioned in Section 9.5, if we assume \vec{g} is uniform over the object, the center of gravity of the object coincides with its center of mass. To see why, consider an object of arbitrary shape lying in the xy plane as illustrated in Figure 12.4. Suppose the object is divided into a large number of particles of masses m_1, m_2, m_3, \dots having coordinates $(x_1, y_1), (x_2, y_2), (x_3, y_3), \dots$. In Equation 9.29, we defined the x coordinate of the center of mass of such an object to be

$$x_{\text{CM}} = \frac{m_1x_1 + m_2x_2 + m_3x_3 + \dots}{m_1 + m_2 + m_3 + \dots} = \frac{\sum_i m_i x_i}{\sum_i m_i}$$

We use a similar equation to define the y coordinate of the center of mass, replacing each x with its y counterpart.

Let us now examine the situation from another point of view by considering the gravitational force exerted on each particle as shown in Figure 12.5. Each particle contributes a torque about an axis through the origin equal in magnitude to the particle's weight mg multiplied by its moment arm. For example, the magnitude of the torque due to the force $m_1\vec{g}_1$ is $m_1g_1x_1$, where g_1 is the value of the gravitational acceleration at the position of the particle of mass m_1 . We wish to locate the center of gravity, the point at which application of the single gravitational force $M\vec{g}_{\text{CG}}$ (where $M = m_1 + m_2 + m_3 + \dots$ is the total mass of the object and \vec{g}_{CG} is the acceleration due to gravity at the location of the center of gravity) has the same effect on

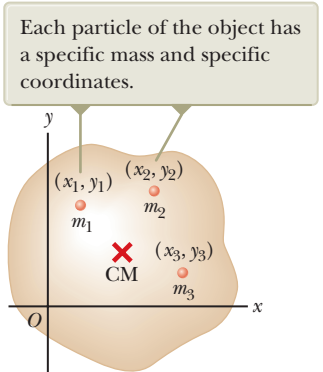


Figure 12.4 An object can be divided into many small particles. These particles can be used to locate the center of mass.

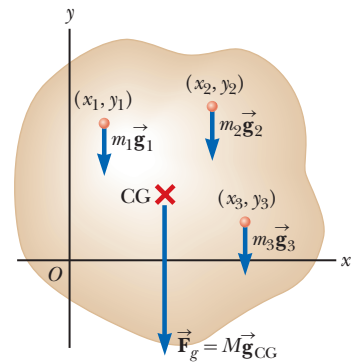


Figure 12.5 By dividing an object into many particles, we can find its center of gravity.

rotation as does the combined effect of all the individual gravitational forces $m_i \vec{g}_i$. Equating the torque resulting from $M \vec{g}_{CG}$ acting at the center of gravity to the sum of the torques acting on the individual particles gives

$$(m_1 + m_2 + m_3 + \cdots) g_{CG} x_{CG} = m_1 g_1 x_1 + m_2 g_2 x_2 + m_3 g_3 x_3 + \cdots$$

This expression accounts for the possibility that the value of g can in general vary over the object. If we assume uniform g over the object (as is usually the case), the g factors cancel and we obtain

$$x_{CG} = \frac{m_1 x_1 + m_2 x_2 + m_3 x_3 + \cdots}{m_1 + m_2 + m_3 + \cdots} \quad (12.4)$$

Comparing this result with Equation 9.29 shows that the center of gravity is located at the center of mass as long as \vec{g} is uniform over the entire object. Several examples in the next section deal with homogeneous, symmetric objects. The center of gravity for any such object coincides with its geometric center.

- Quick Quiz 12.3** A meterstick of uniform density is hung from a string tied at the 25-cm mark. A 0.50-kg object is hung from the zero end of the meterstick, and the meterstick is balanced horizontally. What is the mass of the meterstick? (a) 0.25 kg (b) 0.50 kg (c) 0.75 kg (d) 1.0 kg (e) 2.0 kg (f) impossible to determine

12.3 Examples of Rigid Objects in Static Equilibrium




Figure 12.6 This one-bottle wine holder is a surprising display of static equilibrium.

The photograph of the one-bottle wine holder in Figure 12.6 shows one example of a balanced mechanical system that seems to defy gravity. For the system (wine holder plus bottle) to be in equilibrium, the net external force must be zero (see Eq. 12.1) and the net external torque must be zero (see Eq. 12.2). The second condition can be satisfied only when the center of gravity of the system is directly over the support point.

Problem-Solving Strategy Rigid Object in Equilibrium

When analyzing a rigid object in equilibrium under the action of several external forces, use the following procedure.

- 1. Conceptualize.** Think about the object that is in equilibrium and identify all the forces on it. Imagine what effect each force would have on the rotation of the object if it were the only force acting.
- 2. Categorize.** Confirm that the object under consideration is indeed a rigid object in equilibrium. The object must have zero translational acceleration and zero angular acceleration.
- 3. Analyze.** Draw a diagram and label all external forces acting on the object. Try to guess the correct direction for any forces that are not specified. When using the particle under a net force model, the object on which forces act can be represented in a free-body diagram with a dot because it does not matter where on the object the forces are applied. When using the rigid object in equilibrium model, however, we cannot use a dot to represent the object because the location where forces act is important in the calculation. Therefore, in a diagram showing the forces on an object, we must show the actual object or a simplified version of it.

Resolve all forces into rectangular components, choosing a convenient coordinate system. Then apply the first condition for equilibrium, Equation 12.1. Remember to keep track of the signs of the various force components.

► **Problem-Solving Strategy** continued

Choose a convenient axis for calculating the net torque on the rigid object. Remember that the choice of the axis for the torque equation is arbitrary; therefore, choose an axis that simplifies your calculation as much as possible. Usually, the most convenient axis for calculating torques is one through a point through which the lines of action of several forces pass, so their torques around this axis are zero. If you don't know a force or don't need to know a force, it is often beneficial to choose an axis through the point at which this force acts. Apply the second condition for equilibrium, Equation 12.2.

Solve the simultaneous equations for the unknowns in terms of the known quantities.

4. Finalize. Make sure your results are consistent with your diagram. If you selected a direction that leads to a negative sign in your solution for a force, do not be alarmed; it merely means that the direction of the force is the opposite of what you guessed. Add up the vertical and horizontal forces on the object and confirm that each set of components adds to zero. Add up the torques on the object and confirm that the sum equals zero.

Example 12.1 The Seesaw Revisited **AM**

A seesaw consisting of a uniform board of mass M and length ℓ supports at rest a father and daughter with masses m_f and m_d , respectively, as shown in Figure 12.7. The support (called the *fulcrum*) is under the center of gravity of the board, the father is a distance d from the center, and the daughter is a distance $\ell/2$ from the center.

(A) Determine the magnitude of the upward force \vec{n} exerted by the support on the board.

SOLUTION

Conceptualize Let us focus our attention on the board and consider the gravitational forces on the father and daughter as forces applied directly to the board. The daughter would cause a clockwise rotation of the board around the support, whereas the father would cause a counterclockwise rotation.

Categorize Because the text of the problem states that the system is at rest, we model the board as a *rigid object in equilibrium*. Because we will only need the first condition of equilibrium to solve this part of the problem, however, we could also simply model the board as a *particle in equilibrium*.

Analyze Define upward as the positive y direction and substitute the forces on the board into Equation 12.1:

$$n - m_f g - m_d g - Mg = 0$$

Solve for the magnitude of the force \vec{n} :

$$(1) \quad n = m_f g + m_d g + Mg = (m_f + m_d + M)g$$

(B) Determine where the father should sit to balance the system at rest.

SOLUTION

Categorize This part of the problem requires the introduction of torque to find the position of the father, so we model the board as a *rigid object in equilibrium*.

Analyze The board's center of gravity is at its geometric center because we are told that the board is uniform. If we choose a rotation axis perpendicular to the page through the center of gravity of the board, the torques produced by \vec{n} and the gravitational force on the board about this axis are zero.

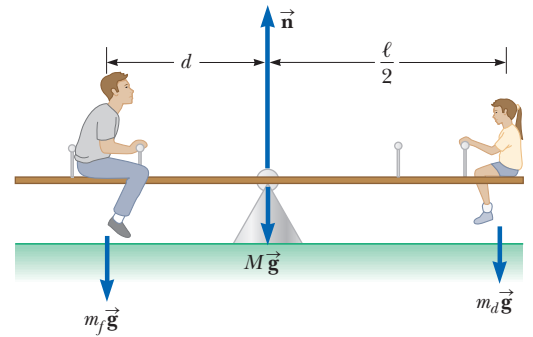


Figure 12.7 (Example 12.1) A balanced system.

continued

12.1 continued

Substitute expressions for the torques on the board due to the father and daughter into Equation 12.2:

$$(m_f g)(d) - (m_d g)\frac{\ell}{2} = 0$$

Solve for d :

$$d = \left(\frac{m_d}{m_f}\right)\frac{\ell}{2}$$

Finalize This result is the same one we obtained in Example 11.6 by evaluating the angular acceleration of the system and setting the angular acceleration equal to zero.

WHAT IF? Suppose we had chosen another point through which the rotation axis were to pass. For example, suppose the axis is perpendicular to the page and passes through the location of the father. Does that change the results to parts (A) and (B)?

Answer Part (A) is unaffected because the calculation of the net force does not involve a rotation axis. In part (B), we would conceptually expect there to be no change if a different rotation axis is chosen because the second condition of equilibrium claims that the torque is zero about *any* rotation axis.

Let's verify this answer mathematically. Recall that the sign of the torque associated with a force is positive if that force tends to rotate the system counterclockwise, whereas the sign of the torque is negative if the force tends to rotate the system clockwise. Let's choose a rotation axis perpendicular to the page and passing through the location of the father.

Substitute expressions for the torques on the board around this axis into Equation 12.2:

$$n(d) - (Mg)(d) - (m_d g)\left(d + \frac{\ell}{2}\right) = 0$$

Substitute from Equation (1) in part (A) and solve for d :

$$(m_f + m_d + M)g(d) - (Mg)(d) - (m_d g)\left(d + \frac{\ell}{2}\right) = 0$$

$$(m_f g)(d) - (m_d g)\left(\frac{\ell}{2}\right) = 0 \rightarrow d = \left(\frac{m_d}{m_f}\right)\frac{\ell}{2}$$

This result is in agreement with the one obtained in part (B).

Example 12.2 Standing on a Horizontal Beam

A uniform horizontal beam with a length of $\ell = 8.00$ m and a weight of $W_b = 200$ N is attached to a wall by a pin connection. Its far end is supported by a cable that makes an angle of $\phi = 53.0^\circ$ with the beam (Fig. 12.8a). A person of weight $W_p = 600$ N stands a distance $d = 2.00$ m from the wall. Find the tension in the cable as well as the magnitude and direction of the force exerted by the wall on the beam.

SOLUTION

Conceptualize Imagine the person in Figure 12.8a moving outward on the beam. It seems reasonable that the farther he moves outward, the larger the torque he applies about the pivot and the larger the tension in the cable must be to balance this torque.

Categorize Because the system is at rest, we categorize the beam as a *rigid object in equilibrium*.

Analyze We identify all the external forces acting on the beam: the 200-N gravitational force, the

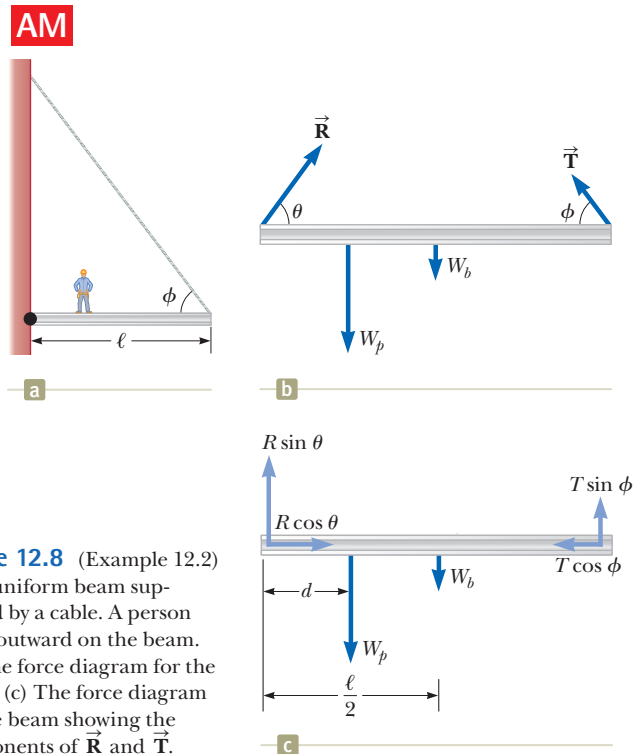


Figure 12.8 (Example 12.2) (a) A uniform beam supported by a cable. A person walks outward on the beam. (b) The force diagram for the beam. (c) The force diagram for the beam showing the components of \vec{R} and \vec{T} .

12.2 continued

force \vec{T} exerted by the cable, the force \vec{R} exerted by the wall at the pivot, and the 600-N force that the person exerts on the beam. These forces are all indicated in the force diagram for the beam shown in Figure 12.8b. When we assign directions for forces, it is sometimes helpful to imagine what would happen if a force were suddenly removed. For example, if the wall were to vanish suddenly, the left end of the beam would move to the left as it begins to fall. This scenario tells us that the wall is not only holding the beam up but is also pressing outward against it. Therefore, we draw the vector \vec{R} in the direction shown in Figure 12.8b. Figure 12.8c shows the horizontal and vertical components of \vec{T} and \vec{R} .

Applying the first condition of equilibrium, substitute expressions for the forces on the beam into component equations from Equation 12.1:

$$(1) \quad \sum F_x = R \cos \theta - T \cos \phi = 0$$

$$(2) \quad \sum F_y = R \sin \theta + T \sin \phi - W_p - W_b = 0$$

where we have chosen rightward and upward as our positive directions. Because R , T , and θ are all unknown, we cannot obtain a solution from these expressions alone. (To solve for the unknowns, the number of simultaneous equations must generally equal the number of unknowns.)

Now let's invoke the condition for rotational equilibrium. A convenient axis to choose for our torque equation is the one that passes through the pin connection. The feature that makes this axis so convenient is that the force \vec{R} and the horizontal component of \vec{T} both have a moment arm of zero; hence, these forces produce no torque about this axis.

Substitute expressions for the torques on the beam into Equation 12.2:

$$\sum \tau_z = (T \sin \phi)(\ell) - W_p d - W_b \left(\frac{\ell}{2}\right) = 0$$

This equation contains only T as an unknown because of our choice of rotation axis. Solve for T and substitute numerical values:

$$T = \frac{W_p d + W_b(\ell/2)}{\ell \sin \phi} = \frac{(600 \text{ N})(2.00 \text{ m}) + (200 \text{ N})(4.00 \text{ m})}{(8.00 \text{ m}) \sin 53.0^\circ} = 313 \text{ N}$$

Rearrange Equations (1) and (2) and then divide:

$$\frac{R \sin \theta}{R \cos \theta} = \tan \theta = \frac{W_p + W_b - T \sin \phi}{T \cos \phi}$$

Solve for θ and substitute numerical values:

$$\begin{aligned} \theta &= \tan^{-1} \left(\frac{W_p + W_b - T \sin \phi}{T \cos \phi} \right) \\ &= \tan^{-1} \left[\frac{600 \text{ N} + 200 \text{ N} - (313 \text{ N}) \sin 53.0^\circ}{(313 \text{ N}) \cos 53.0^\circ} \right] = 71.1^\circ \end{aligned}$$

Solve Equation (1) for R and substitute numerical values:

$$R = \frac{T \cos \phi}{\cos \theta} = \frac{(313 \text{ N}) \cos 53.0^\circ}{\cos 71.1^\circ} = 581 \text{ N}$$

Finalize The positive value for the angle θ indicates that our estimate of the direction of \vec{R} was accurate.

Had we selected some other axis for the torque equation, the solution might differ in the details but the answers would be the same. For example, had we chosen an axis through the center of gravity of the beam, the torque equation would involve both T and R . This equation, coupled with Equations (1) and (2), however, could still be solved for the unknowns. Try it!

WHAT IF? What if the person walks farther out on the beam? Does T change? Does R change? Does θ change?

Answer T must increase because the gravitational force on the person exerts a larger torque about the pin connection, which must be countered by a larger torque in the opposite direction due to an increased value of T . If T increases, the vertical component of \vec{R} decreases to maintain force equilibrium in the vertical direction. Force equilibrium in the horizontal direction, however, requires an increased horizontal component of \vec{R} to balance the horizontal component of the increased \vec{T} . This fact suggests that θ becomes smaller, but it is hard to predict what happens to R . Problem 66 asks you to explore the behavior of R .

Example 12.3 The Leaning Ladder AM

A uniform ladder of length ℓ rests against a smooth, vertical wall (Fig. 12.9a). The mass of the ladder is m , and the coefficient of static friction between the ladder and the ground is $\mu_s = 0.40$. Find the minimum angle θ_{\min} at which the ladder does not slip.

SOLUTION

Conceptualize Think about any ladders you have climbed. Do you want a large friction force between the bottom of the ladder and the surface or a small one? If the friction force is zero, will the ladder stay up? Simulate a ladder with a ruler leaning against a vertical surface. Does the ruler slip at some angles and stay up at others?

Categorize We do not wish the ladder to slip, so we model it as a *rigid object in equilibrium*.

Analyze A diagram showing all the external forces acting on the ladder is illustrated in Figure 12.9b. The force exerted by the ground on the ladder is the vector sum of a normal force \vec{n} and the force of static friction \vec{f}_s . The wall exerts a normal force \vec{P} on the top of the ladder, but there is no friction force here because the wall is smooth. So the net force on the top of the ladder is perpendicular to the wall and of magnitude P .

Apply the first condition for equilibrium to the ladder in both the x and the y directions:

$$(1) \quad \sum F_x = f_s - P = 0$$

$$(2) \quad \sum F_y = n - mg = 0$$

Solve Equation (1) for P :

$$(3) \quad P = f_s$$

Solve Equation (2) for n :

$$(4) \quad n = mg$$

When the ladder is on the verge of slipping, the force of static friction must have its maximum value, which is given by $f_{s,\max} = \mu_s n$. Combine this equation with Equations (3) and (4):

$$(5) \quad P_{\max} = f_{s,\max} = \mu_s n = \mu_s mg$$

Apply the second condition for equilibrium to the ladder, evaluating torques about an axis perpendicular to the page through O :

$$\sum \tau_O = P\ell \sin \theta - mg \frac{\ell}{2} \cos \theta = 0$$

Solve for $\tan \theta$:

$$\frac{\sin \theta}{\cos \theta} = \tan \theta = \frac{mg}{2P} \rightarrow \theta = \tan^{-1} \left(\frac{mg}{2P} \right)$$

Under the conditions that the ladder is just ready to slip, θ becomes θ_{\min} and P_{\max} is given by Equation (5). Substitute:

$$\theta_{\min} = \tan^{-1} \left(\frac{mg}{2P_{\max}} \right) = \tan^{-1} \left(\frac{1}{2\mu_s} \right) = \tan^{-1} \left[\frac{1}{2(0.40)} \right] = 51^\circ$$

Finalize Notice that the angle depends only on the coefficient of friction, not on the mass or length of the ladder.

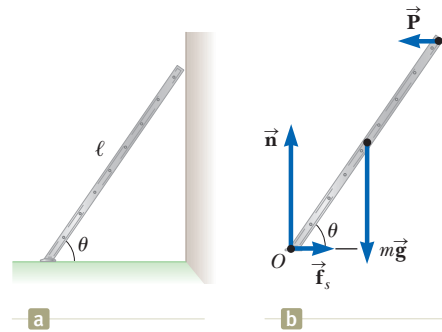


Figure 12.9 (Example 12.3) (a) A uniform ladder at rest, leaning against a smooth wall. The ground is rough. (b) The forces on the ladder.

Example 12.4 Negotiating a Curb AM

(A) Estimate the magnitude of the force \vec{F} a person must apply to a wheelchair's main wheel to roll up over a sidewalk curb (Fig. 12.10a). This main wheel that comes in contact with the curb has a radius r , and the height of the curb is h .

12.4 continued

SOLUTION

Conceptualize Think about wheelchair access to buildings. Generally, there are ramps built for individuals in wheelchairs. Steplike structures such as curbs are serious barriers to a wheelchair.

Categorize Imagine the person exerts enough force so that the bottom of the main wheel just loses contact with the lower surface and hovers at rest. We model the wheel in this situation as a *rigid object in equilibrium*.

Analyze Usually, the person's hands supply the required force to a slightly smaller wheel that is concentric with the main wheel. For simplicity, let's assume the radius of this second wheel is the same as the radius of the main wheel. Let's estimate a combined gravitational force of magnitude $mg = 1\,400\text{ N}$ for the person and the wheelchair, acting along a line of action passing through the axle of the main wheel, and choose a wheel radius of $r = 30\text{ cm}$. We also pick a curb height of $h = 10\text{ cm}$. Let's also assume the wheelchair and occupant are symmetric and each wheel supports a weight of 700 N . We then proceed to analyze only one of the main wheels. Figure 12.10b shows the geometry for a single wheel.

When the wheel is just about to be raised from the street, the normal force exerted by the ground on the wheel at point B goes to zero. Hence, at this time only three forces act on the wheel as shown in the force diagram in Figure 12.10c. The force \vec{R} , which is the force exerted by the curb on the wheel, acts at point A , so if we choose to have our axis of rotation be perpendicular to the page and pass through point A , we do not need to include \vec{R} in our torque equation. The moment arm of \vec{F} relative to an axis through A is given by $2r - h$ (see Fig. 12.10c).

Use the triangle OAC in Figure 12.10b to find the moment arm d of the gravitational force $m\vec{g}$ acting on the wheel relative to an axis through point A :

Apply the second condition for equilibrium to the wheel, taking torques about an axis through A :

Substitute for d from Equation (1):

Solve for F :

Simplify:

Substitute the known values:

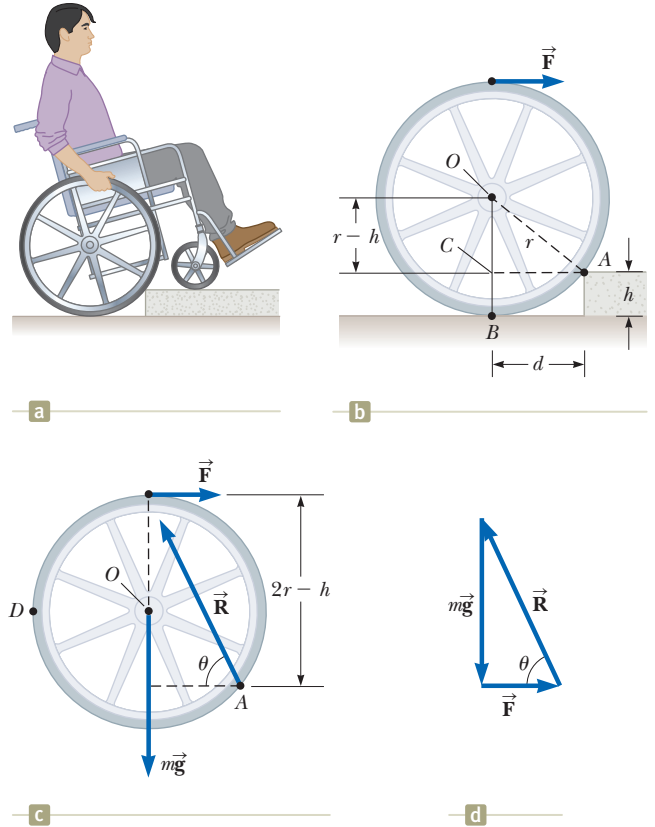


Figure 12.10 (Example 12.4) (a) A person in a wheelchair attempts to roll up over a curb. (b) Details of the wheel and curb. The person applies a force \vec{F} to the top of the wheel. (c) A force diagram for the wheel when it is just about to be raised. Three forces act on the wheel at this instant: \vec{F} , which is exerted by the hand; \vec{R} , which is exerted by the curb; and the gravitational force $m\vec{g}$. (d) The vector sum of the three external forces acting on the wheel is zero.

$$(1) \quad d = \sqrt{r^2 - (r-h)^2} = \sqrt{2rh - h^2}$$

$$(2) \quad \sum \tau_A = mgd - F(2r-h) = 0$$

$$mg\sqrt{2rh - h^2} - F(2r-h) = 0$$

$$(3) \quad F = \frac{mg\sqrt{2rh - h^2}}{2r-h}$$

$$F = mg \frac{\sqrt{h}\sqrt{2r-h}}{2r-h} = mg\sqrt{\frac{h}{2r-h}}$$

$$F = (700\text{ N})\sqrt{\frac{0.1\text{ m}}{2(0.3\text{ m}) - 0.1\text{ m}}} \\ = 3 \times 10^2\text{ N}$$

continued

▶ 12.4 continued

(B) Determine the magnitude and direction of $\vec{\mathbf{R}}$.

SOLUTION

Apply the first condition for equilibrium to the x and y components of the forces on the wheel:

$$(4) \quad \sum F_x = F - R \cos \theta = 0$$

$$(5) \quad \sum F_y = R \sin \theta - mg = 0$$

Divide Equation (5) by Equation (4):

$$\frac{R \sin \theta}{R \cos \theta} = \tan \theta = \frac{mg}{F}$$

Solve for the angle θ :

$$\theta = \tan^{-1} \left(\frac{mg}{F} \right) = \tan^{-1} \left(\frac{700 \text{ N}}{300 \text{ N}} \right) = 70^\circ$$

Solve Equation (5) for R and substitute numerical values:

$$R = \frac{mg}{\sin \theta} = \frac{700 \text{ N}}{\sin 70^\circ} = 8 \times 10^2 \text{ N}$$

Finalize Notice that we have kept only one digit as significant. (We have written the angle as 70° because 7×10^{10} is awkward!) The results indicate that the force that must be applied to each wheel is substantial. You may want to estimate the force required to roll a wheelchair up a typical sidewalk accessibility ramp for comparison.

WHAT IF? Would it be easier to negotiate the curb if the person grabbed the wheel at point D in Figure 12.10c and pulled *upward*?

Answer If the force $\vec{\mathbf{F}}$ in Figure 12.10c is rotated counterclockwise by 90° and applied at D , its moment arm about an axis through A is $d + r$. Let's call the magnitude of this new force F' .

Modify Equation (2) for this situation:

$$\sum \tau_A = mgd - F'(d + r) = 0$$

Solve this equation for F' and substitute for d :

$$F' = \frac{mgd}{d + r} = \frac{mg\sqrt{2rh - h^2}}{\sqrt{2rh - h^2} + r}$$

Take the ratio of this force to the original force from Equation (3) and express the result in terms of h/r , the ratio of the curb height to the wheel radius:

$$\frac{F'}{F} = \frac{\frac{mg\sqrt{2rh - h^2}}{\sqrt{2rh - h^2} + r}}{\frac{mg\sqrt{2rh - h^2}}{2r - h}} = \frac{2r - h}{\sqrt{2rh - h^2} + r} = \frac{2 - \left(\frac{h}{r}\right)}{\sqrt{2\left(\frac{h}{r}\right) - \left(\frac{h}{r}\right)^2} + 1}$$

Substitute the ratio $h/r = 0.33$ from the given values:

$$\frac{F'}{F} = \frac{2 - 0.33}{\sqrt{2(0.33) - (0.33)^2} + 1} = 0.96$$

This result tells us that, *for these values*, it is slightly easier to pull upward at D than horizontally at the top of the wheel. For very high curbs, so that h/r is close to 1, the ratio F'/F drops to about 0.5 because point A is located near the right edge of the wheel in Figure 12.10b. The force at D is applied at a distance of about $2r$ from A , whereas the force at the top of the wheel has a moment arm of only about r . For high curbs, then, it is best to pull upward at D , although a large value of the force is required. For small curbs, it is best to apply the force at the top of the wheel. The ratio F'/F becomes larger than 1 at about $h/r = 0.3$ because point A is now close to the bottom of the wheel and the force applied at the top of the wheel has a larger moment arm than when applied at D .

Finally, let's comment on the validity of these mathematical results. Consider Figure 12.10d and imagine that the vector $\vec{\mathbf{F}}$ is upward instead of to the right. There is no way the three vectors can add to equal zero as required by the first equilibrium condition. Therefore, our results above may be qualitatively valid, but not exact quantitatively. To cancel the horizontal component of $\vec{\mathbf{R}}$, the force at D must be applied at an angle to the vertical rather than straight upward. This feature makes the calculation more complicated and requires both conditions of equilibrium.

12.4 Elastic Properties of Solids

Except for our discussion about springs in earlier chapters, we have assumed objects remain rigid when external forces act on them. In Section 9.8, we explored deformable systems. In reality, all objects are deformable to some extent. That is, it is possible to change the shape or the size (or both) of an object by applying external forces. As these changes take place, however, internal forces in the object resist the deformation.

We shall discuss the deformation of solids in terms of the concepts of *stress* and *strain*. **Stress** is a quantity that is proportional to the force causing a deformation; more specifically, stress is the external force acting on an object per unit cross-sectional area. The result of a stress is **strain**, which is a measure of the degree of deformation. It is found that, for sufficiently small stresses, stress is proportional to strain; the constant of proportionality depends on the material being deformed and on the nature of the deformation. We call this proportionality constant the **elastic modulus**. The elastic modulus is therefore defined as the ratio of the stress to the resulting strain:

$$\text{Elastic modulus} \equiv \frac{\text{stress}}{\text{strain}} \quad (12.5)$$

The elastic modulus in general relates what is done to a solid object (a force is applied) to how that object responds (it deforms to some extent). It is similar to the spring constant k in Hooke's law (Eq. 7.9) that relates a force applied to a spring and the resultant deformation of the spring, measured by its extension or compression.

We consider three types of deformation and define an elastic modulus for each:

1. **Young's modulus** measures the resistance of a solid to a change in its length.
2. **Shear modulus** measures the resistance to motion of the planes within a solid parallel to each other.
3. **Bulk modulus** measures the resistance of solids or liquids to changes in their volume.

Young's Modulus: Elasticity in Length

Consider a long bar of cross-sectional area A and initial length L_i that is clamped at one end as in Figure 12.11. When an external force is applied perpendicular to the cross section, internal molecular forces in the bar resist distortion ("stretching"), but the bar reaches an equilibrium situation in which its final length L_f is greater than L_i and in which the external force is exactly balanced by the internal forces. In such a situation, the bar is said to be stressed. We define the **tensile stress** as the ratio of the magnitude of the external force F to the cross-sectional area A , where the cross section is perpendicular to the force vector. The **tensile strain** in this case is defined as the ratio of the change in length ΔL to the original length L_i . We define **Young's modulus** by a combination of these two ratios:

$$Y \equiv \frac{\text{tensile stress}}{\text{tensile strain}} = \frac{F/A}{\Delta L/L_i} \quad (12.6)$$

Young's modulus is typically used to characterize a rod or wire stressed under either tension or compression. Because strain is a dimensionless quantity, Y has units of force per unit area. Typical values are given in Table 12.1 on page 374.

For relatively small stresses, the bar returns to its initial length when the force is removed. The **elastic limit** of a substance is defined as the maximum stress that can be applied to the substance before it becomes permanently deformed and does not return to its initial length. It is possible to exceed the elastic limit of a substance by

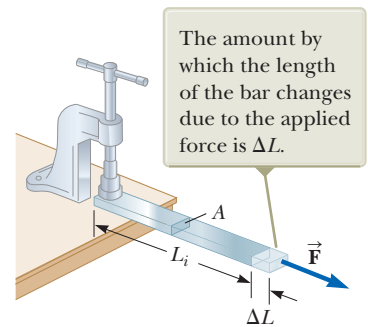
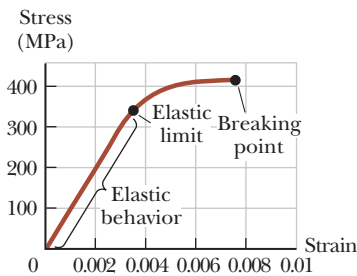


Figure 12.11 A force \vec{F} is applied to the free end of a bar clamped at the other end.

◀ Young's modulus

Table 12.1 Typical Values for Elastic Moduli

Substance	Young's Modulus (N/m ²)	Shear Modulus (N/m ²)	Bulk Modulus (N/m ²)
Tungsten	35×10^{10}	14×10^{10}	20×10^{10}
Steel	20×10^{10}	8.4×10^{10}	6×10^{10}
Copper	11×10^{10}	4.2×10^{10}	14×10^{10}
Brass	9.1×10^{10}	3.5×10^{10}	6.1×10^{10}
Aluminum	7.0×10^{10}	2.5×10^{10}	7.0×10^{10}
Glass	$6.5\text{--}7.8 \times 10^{10}$	$2.6\text{--}3.2 \times 10^{10}$	$5.0\text{--}5.5 \times 10^{10}$
Quartz	5.6×10^{10}	2.6×10^{10}	2.7×10^{10}
Water	—	—	0.21×10^{10}
Mercury	—	—	2.8×10^{10}

**Figure 12.12** Stress-versus-strain curve for an elastic solid.

applying a sufficiently large stress as seen in Figure 12.12. Initially, a stress-versus-strain curve is a straight line. As the stress increases, however, the curve is no longer a straight line. When the stress exceeds the elastic limit, the object is permanently distorted and does not return to its original shape after the stress is removed. As the stress is increased even further, the material ultimately breaks.

Shear Modulus: Elasticity of Shape

Another type of deformation occurs when an object is subjected to a force parallel to one of its faces while the opposite face is held fixed by another force (Fig. 12.13a). The stress in this case is called a *shear stress*. If the object is originally a rectangular block, a shear stress results in a shape whose cross section is a parallelogram. A book pushed sideways as shown in Figure 12.13b is an example of an object subjected to a shear stress. To a first approximation (for small distortions), no change in volume occurs with this deformation.

We define the **shear stress** as F/A , the ratio of the tangential force to the area A of the face being sheared. The **shear strain** is defined as the ratio $\Delta x/h$, where Δx is the horizontal distance that the sheared face moves and h is the height of the object. In terms of these quantities, the **shear modulus** is

Shear modulus ►

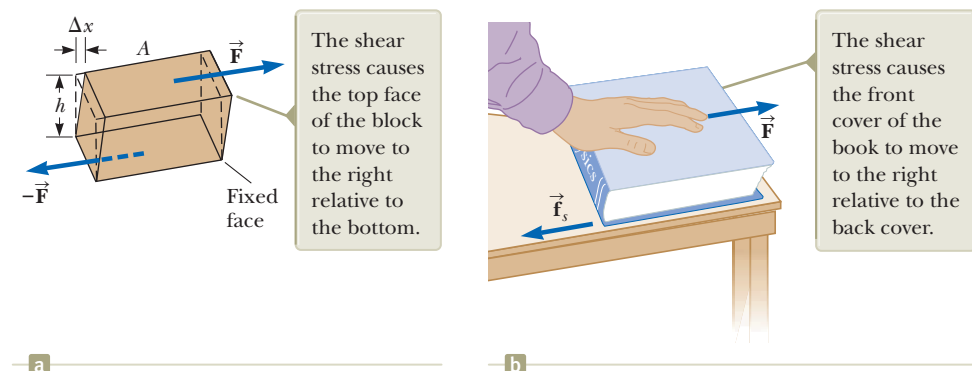
$$S \equiv \frac{\text{shear stress}}{\text{shear strain}} = \frac{F/A}{\Delta x/h} \quad (12.7)$$

Values of the shear modulus for some representative materials are given in Table 12.1. Like Young's modulus, the unit of shear modulus is the ratio of that for force to that for area.

Bulk Modulus: Volume Elasticity

Bulk modulus characterizes the response of an object to changes in a force of uniform magnitude applied perpendicularly over the entire surface of the object as shown in Figure 12.14. (We assume here the object is made of a single substance.)

Figure 12.13 (a) A shear deformation in which a rectangular block is distorted by two forces of equal magnitude but opposite directions applied to two parallel faces. (b) A book is under shear stress when a hand placed on the cover applies a horizontal force away from the spine.



As we shall see in Chapter 14, such a uniform distribution of forces occurs when an object is immersed in a fluid. An object subject to this type of deformation undergoes a change in volume but no change in shape. The **volume stress** is defined as the ratio of the magnitude of the total force F exerted on a surface to the area A of the surface. The quantity $P = F/A$ is called **pressure**, which we shall study in more detail in Chapter 14. If the pressure on an object changes by an amount $\Delta P = \Delta F/A$, the object experiences a volume change ΔV . The **volume strain** is equal to the change in volume ΔV divided by the initial volume V_i . Therefore, from Equation 12.5, we can characterize a volume (“bulk”) compression in terms of the **bulk modulus**, which is defined as

$$B \equiv \frac{\text{volume stress}}{\text{volume strain}} = -\frac{\Delta F/A}{\Delta V/V_i} = -\frac{\Delta P}{\Delta V/V_i} \quad (12.8)$$

A negative sign is inserted in this defining equation so that B is a positive number. This maneuver is necessary because an increase in pressure (positive ΔP) causes a decrease in volume (negative ΔV) and vice versa.

Table 12.1 lists bulk moduli for some materials. If you look up such values in a different source, you may find the reciprocal of the bulk modulus listed. The reciprocal of the bulk modulus is called the **compressibility** of the material.

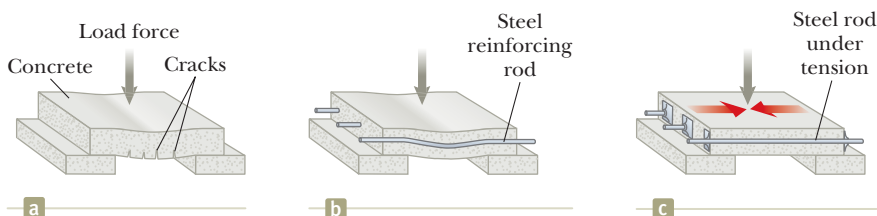
Notice from Table 12.1 that both solids and liquids have a bulk modulus. No shear modulus and no Young’s modulus are given for liquids, however, because a liquid does not sustain a shearing stress or a tensile stress. If a shearing force or a tensile force is applied to a liquid, the liquid simply flows in response.

- Quick Quiz 12.4** For the three parts of this Quick Quiz, choose from the following choices the correct answer for the elastic modulus that describes the relationship between stress and strain for the system of interest, which is in italics: (a) Young’s modulus (b) shear modulus (c) bulk modulus (d) none of those choices (i) A *block of iron* is sliding across a horizontal floor. The friction force between the sliding block and the floor causes the block to deform. (ii) A trapeze artist swings through a circular arc. At the bottom of the swing, the *wires* supporting the trapeze are longer than when the trapeze artist simply hangs from the trapeze due to the increased tension in them. (iii) A spacecraft carries a *steel sphere* to a planet on which atmospheric pressure is much higher than on the Earth. The higher pressure causes the radius of the sphere to decrease.

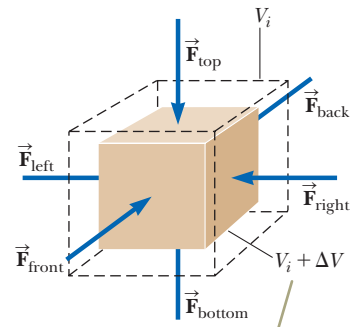
Prestressed Concrete

If the stress on a solid object exceeds a certain value, the object fractures. The maximum stress that can be applied before fracture occurs—called the *tensile strength*, *compressive strength*, or *shear strength*—depends on the nature of the material and on the type of applied stress. For example, concrete has a tensile strength of about $2 \times 10^6 \text{ N/m}^2$, a compressive strength of $20 \times 10^6 \text{ N/m}^2$, and a shear strength of $2 \times 10^6 \text{ N/m}^2$. If the applied stress exceeds these values, the concrete fractures. It is common practice to use large safety factors to prevent failure in concrete structures.

Concrete is normally very brittle when it is cast in thin sections. Therefore, concrete slabs tend to sag and crack at unsupported areas as shown in Figure 12.15a. The slab can be strengthened by the use of steel rods to reinforce the concrete as illustrated in Figure 12.15b. Because concrete is much stronger under compression (squeezing) than under tension (stretching) or shear, vertical columns of concrete can support



◀ Bulk modulus



The cube undergoes a change in volume but no change in shape.

Figure 12.14 A cube is under uniform pressure and is therefore compressed on all sides by forces normal to its six faces. The arrowheads of force vectors on the sides of the cube that are not visible are hidden by the cube.

Figure 12.15 (a) A concrete slab with no reinforcement tends to crack under a heavy load. (b) The strength of the concrete is increased by using steel reinforcement rods. (c) The concrete is further strengthened by prestressing it with steel rods under tension.

very heavy loads, whereas horizontal beams of concrete tend to sag and crack. A significant increase in shear strength is achieved, however, if the reinforced concrete is prestressed as shown in Figure 12.15c. As the concrete is being poured, the steel rods are held under tension by external forces. The external forces are released after the concrete cures; the result is a permanent tension in the steel and hence a compressive stress on the concrete. The concrete slab can now support a much heavier load.

Example 12.5 Stage Design

In Example 8.2, we analyzed a cable used to support an actor as he swings onto the stage. Now suppose the tension in the cable is 940 N as the actor reaches the lowest point. What diameter should a 10-m-long steel cable have if we do not want it to stretch more than 0.50 cm under these conditions?

SOLUTION

Conceptualize Look back at Example 8.2 to recall what is happening in this situation. We ignored any stretching of the cable there, but we wish to address this phenomenon in this example.

Categorize We perform a simple calculation involving Equation 12.6, so we categorize this example as a substitution problem.

Solve Equation 12.6 for the cross-sectional area of the cable:

$$A = \frac{FL_i}{Y\Delta L}$$

Assuming the cross section is circular, find the diameter of the cable from $d = 2r$ and $A = \pi r^2$:

$$d = 2r = 2\sqrt{\frac{A}{\pi}} = 2\sqrt{\frac{FL_i}{\pi Y\Delta L}}$$

Substitute numerical values:

$$d = 2\sqrt{\frac{(940 \text{ N})(10 \text{ m})}{\pi(20 \times 10^{10} \text{ N/m}^2)(0.0050 \text{ m})}} = 3.5 \times 10^{-3} \text{ m} = 3.5 \text{ mm}$$

To provide a large margin of safety, you would probably use a flexible cable made up of many smaller wires having a total cross-sectional area substantially greater than our calculated value.

Example 12.6 Squeezing a Brass Sphere

A solid brass sphere is initially surrounded by air, and the air pressure exerted on it is $1.0 \times 10^5 \text{ N/m}^2$ (normal atmospheric pressure). The sphere is lowered into the ocean to a depth where the pressure is $2.0 \times 10^7 \text{ N/m}^2$. The volume of the sphere in air is 0.50 m^3 . By how much does this volume change once the sphere is submerged?

SOLUTION

Conceptualize Think about movies or television shows you have seen in which divers go to great depths in the water in submersible vessels. These vessels must be very strong to withstand the large pressure under water. This pressure squeezes the vessel and reduces its volume.

Categorize We perform a simple calculation involving Equation 12.8, so we categorize this example as a substitution problem.

Solve Equation 12.8 for the volume change of the sphere:

$$\Delta V = -\frac{V_i \Delta P}{B}$$

Substitute numerical values:

$$\begin{aligned} \Delta V &= -\frac{(0.50 \text{ m}^3)(2.0 \times 10^7 \text{ N/m}^2 - 1.0 \times 10^5 \text{ N/m}^2)}{6.1 \times 10^{10} \text{ N/m}^2} \\ &= -1.6 \times 10^{-4} \text{ m}^3 \end{aligned}$$

The negative sign indicates that the volume of the sphere decreases.

Summary

Definitions

The gravitational force exerted on an object can be considered as acting at a single point called the **center of gravity**. An object's center of gravity coincides with its center of mass if the object is in a uniform gravitational field.

We can describe the elastic properties of a substance using the concepts of stress and strain. **Stress** is a quantity proportional to the force producing a deformation; **strain** is a measure of the degree of deformation. Stress is proportional to strain, and the constant of proportionality is the **elastic modulus**:

$$\text{Elastic modulus} \equiv \frac{\text{stress}}{\text{strain}} \quad (12.5)$$

Concepts and Principles

Three common types of deformation are represented by (1) the resistance of a solid to elongation under a load, characterized by **Young's modulus** Y ; (2) the resistance of a solid to the motion of internal planes sliding past each other, characterized by the **shear modulus** S ; and (3) the resistance of a solid or fluid to a volume change, characterized by the **bulk modulus** B .

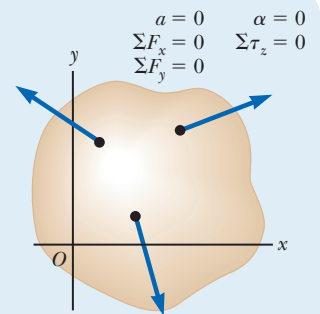
Analysis Model for Problem Solving

Rigid Object in Equilibrium A rigid object in equilibrium exhibits no translational or angular acceleration. The net external force acting on it is zero, and the net external torque on it is zero about any axis:

$$\sum \vec{F}_{\text{ext}} = 0 \quad (12.1)$$

$$\sum \vec{\tau}_{\text{ext}} = 0 \quad (12.2)$$

The first condition is the condition for translational equilibrium, and the second is the condition for rotational equilibrium.



Objective Questions

1. denotes answer available in *Student Solutions Manual/Study Guide*

- The acceleration due to gravity becomes weaker by about three parts in ten million for each meter of increased elevation above the Earth's surface. Suppose a skyscraper is 100 stories tall, with the same floor plan for each story and with uniform average density. Compare the location of the building's center of mass and the location of its center of gravity. Choose one: (a) Its center of mass is higher by a distance of several meters. (b) Its center of mass is higher by a distance of several millimeters. (c) Its center of mass and its center of gravity are in the same location. (d) Its center of gravity is higher by a distance of several millimeters. (e) Its center of gravity is higher by a distance of several meters.
- A rod 7.0 m long is pivoted at a point 2.0 m from the left end. A downward force of 50 N acts at the left end, and a downward force of 200 N acts at the right end. At what distance to the right of the pivot can a third force of 300 N acting upward be placed to produce rotational equilibrium? *Note:* Neglect the weight of the rod. (a) 1.0 m (b) 2.0 m (c) 3.0 m (d) 4.0 m (e) 3.5 m
- Consider the object in Figure OQ12.3. A single force is exerted on the object. The line of action of the force does not pass through the object's center of mass. The acceleration of the object's center of mass due to this force (a) is the same as if the force were applied at the

center of mass, (b) is larger than the acceleration would be if the force were applied at the center of mass, (c) is smaller than the acceleration would be if the force were applied at the center of mass, or (d) is zero because the force causes only angular acceleration about the center of mass.

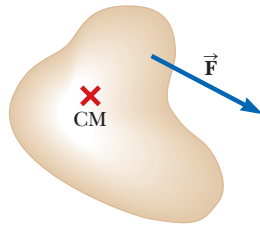


Figure OQ12.3

- Two forces are acting on an object. Which of the following statements is correct? (a) The object is in equilibrium if the forces are equal in magnitude and opposite in direction. (b) The object is in equilibrium if the net torque on the object is zero. (c) The object is in equilibrium if the forces act at the same point on the object. (d) The object is in equilibrium if the net force and the net torque on the object are both zero. (e) The object cannot be in equilibrium because more than one force acts on it.
- In the cabin of a ship, a soda can rests in a saucer-shaped indentation in a built-in counter. The can tilts as the ship slowly rolls. In which case is the can most stable against tipping over? (a) It is most stable when it is full. (b) It is most stable when it is half full. (c) It is most stable when it is empty. (d) It is most stable in two of these cases. (e) It is equally stable in all cases.
- A 20.0-kg horizontal plank 4.00 m long rests on two supports, one at the left end and a second 1.00 m from the right end. What is the magnitude of the force exerted on the plank by the support near the right end? (a) 32.0 N (b) 45.2 N (c) 112 N (d) 131 N (e) 98.2 N
- Assume a single 300-N force is exerted on a bicycle frame as shown in Figure OQ12.7. Consider the torque produced by this force about axes perpendicular to the plane of the paper and through each of the points

A through E, where E is the center of mass of the frame. Rank the torques τ_A , τ_B , τ_C , τ_D , and τ_E from largest to smallest, noting that zero is greater than a negative quantity. If two torques are equal, note their equality in your ranking.

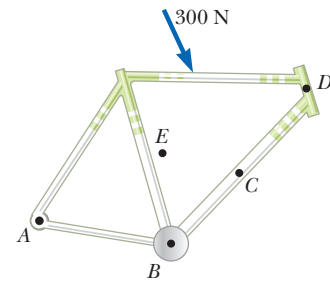


Figure OQ12.7

- In analyzing the equilibrium of a flat, rigid object, you are about to choose an axis about which you will calculate torques. Which of the following describes the choice you should make? (a) The axis should pass through the object's center of mass. (b) The axis should pass through one end of the object. (c) The axis should be either the x axis or the y axis. (d) The axis should pass through any point within the object. (e) Any axis within or outside the object can be chosen.
- A certain wire, 3 m long, stretches by 1.2 mm when under tension 200 N. (i) Does an equally thick wire 6 m long, made of the same material and under the same tension, stretch by (a) 4.8 mm, (b) 2.4 mm, (c) 1.2 mm, (d) 0.6 mm, or (e) 0.3 mm? (ii) A wire with twice the diameter, 3 m long, made of the same material and under the same tension, stretches by what amount? Choose from the same possibilities (a) through (e).
- The center of gravity of an ax is on the centerline of the handle, close to the head. Assume you saw across the handle through the center of gravity and weigh the two parts. What will you discover? (a) The handle side is heavier than the head side. (b) The head side is heavier than the handle side. (c) The two parts are equally heavy. (d) Their comparative weights cannot be predicted.

Conceptual Questions

I. denotes answer available in *Student Solutions Manual/Study Guide*

- A ladder stands on the ground, leaning against a wall. Would you feel safer climbing up the ladder if you were told that the ground is frictionless but the wall is rough or if you were told that the wall is frictionless but the ground is rough? Explain your answer.
- The center of gravity of an object may be located outside the object. Give two examples for which that is the case.
- (a) Give an example in which the net force acting on an object is zero and yet the net torque is nonzero. (b) Give an example in which the net torque acting on an object is zero and yet the net force is nonzero.
- Stand with your back against a wall. Why can't you put your heels firmly against the wall and then bend forward without falling?
- An arbitrarily shaped piece of plywood can be suspended from a string attached to the ceiling. Explain how you could use a plumb bob to find its center of gravity.
- A girl has a large, docile dog she wishes to weigh on a small bathroom scale. She reasons that she can determine her dog's weight with the following method. First she puts the dog's two front feet on the scale and records the scale reading. Then she places only the dog's two back feet on the scale and records the reading. She thinks that the sum of the readings will be the dog's weight. Is she correct? Explain your answer.
- Can an object be in equilibrium if it is in motion? Explain.
- What kind of deformation does a cube of Jell-O exhibit when it jiggles?

Problems



The problems found in this chapter may be assigned online in Enhanced WebAssign

1. straightforward; 2. intermediate; 3. challenging

1. full solution available in the *Student Solutions Manual/Study Guide*

AMT Analysis Model tutorial available in Enhanced WebAssign

GP Guided Problem

M Master It tutorial available in Enhanced WebAssign

W Watch It video solution available in Enhanced WebAssign

Section 12.1 Analysis Model: Rigid Object in Equilibrium

- What are the necessary conditions for equilibrium of the object shown in Figure P12.1? Calculate torques about an axis through point O .
- Why is the following situation impossible? A uniform beam of mass $m_b = 3.00$ kg and length $\ell = 1.00$ m supports blocks with masses $m_1 = 5.00$ kg and $m_2 = 15.0$ kg at two positions as shown in Figure P12.2. The beam rests on two triangular blocks, with point P a distance $d = 0.300$ m to the right of the center of gravity of the beam. The position of the object of mass m_2 is adjusted along the length of the beam until the normal force on the beam at O is zero.

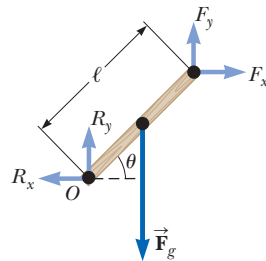


Figure P12.1

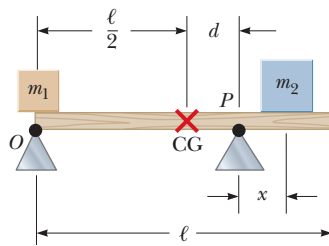


Figure P12.2

Section 12.2 More on the Center of Gravity

Problems 45, 48, 49, and 92 in Chapter 9 can also be assigned with this section.

3. A carpenter's square has the shape of an L as shown in **W** Figure P12.3. Locate its center of gravity.

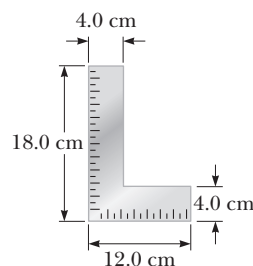


Figure P12.3

4. Consider the following distribution of objects: a **M** 5.00-kg object with its center of gravity at $(0, 0)$ m, a 3.00-kg object at $(0, 4.00)$ m, and a 4.00-kg object at $(3.00, 0)$ m. Where should a fourth object of mass 8.00 kg be placed so that the center of gravity of the four-object arrangement will be at $(0, 0)$?
5. Pat builds a track for his model car out of solid wood as shown in Figure P12.5. The track is 5.00 cm wide, 1.00 m high, and 3.00 m long. The runway is cut so that it forms a parabola with the equation $y = (x - 3)^2/9$. Locate the horizontal coordinate of the center of gravity of this track.

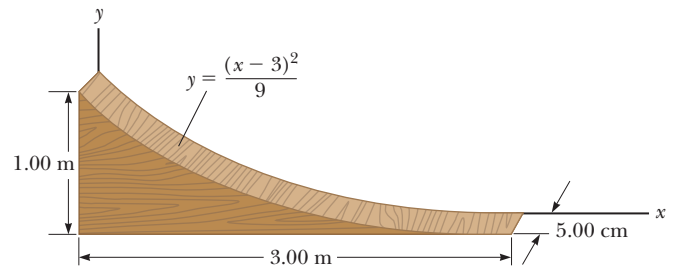


Figure P12.5

6. A circular pizza of radius R has a circular piece of radius $R/2$ removed from one side as shown in Figure P12.6. The center of gravity has moved from C to C' along the x axis. Show that the distance from C to C' is $R/6$. Assume the thickness and density of the pizza are uniform throughout.

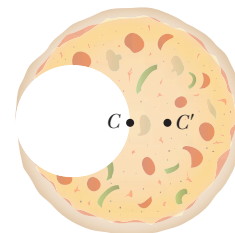


Figure P12.6

7. Figure P12.7 on page 380 shows three uniform objects: a rod with $m_1 = 6.00$ kg, a right triangle with $m_2 = 3.00$ kg, and a square with $m_3 = 5.00$ kg. Their coordinates in meters are given. Determine the center of gravity for the three-object system.

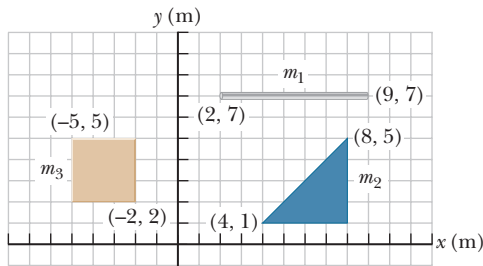


Figure P12.7

Section 12.3 Examples of Rigid Objects in Static Equilibrium

Problems 14, 26, 27, 28, 31, 33, 34, 60, 66, 85, 89, 97, and 100 in Chapter 5 can also be assigned with this section.

- 8.** A 1 500-kg automobile has a wheel base (the distance between the axles) of 3.00 m. The automobile's center of mass is on the centerline at a point 1.20 m behind the front axle. Find the force exerted by the ground on each wheel.
- 9.** Find the mass m of the counterweight needed to balance a truck with mass $M = 1\,500$ kg on an incline of $\theta = 45^\circ$ (Fig. P12.9). Assume both pulleys are frictionless and massless.

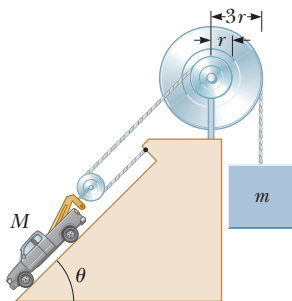


Figure P12.9

- 10.** A mobile is constructed of light rods, light strings, and beach souvenirs as shown in Figure P12.10. If $m_4 = 12.0$ g, find values for (a) m_1 , (b) m_2 , and (c) m_3 .

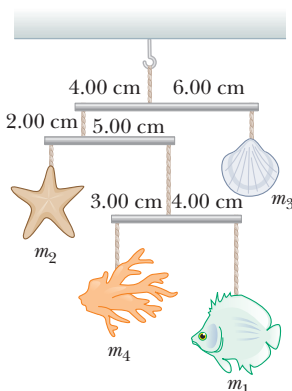


Figure P12.10

- 11.** A uniform beam of length 7.60 m and weight 4.50×10^2 N is carried by two workers, Sam and Joe, as shown in Figure P12.11. Determine the force that each person exerts on the beam.

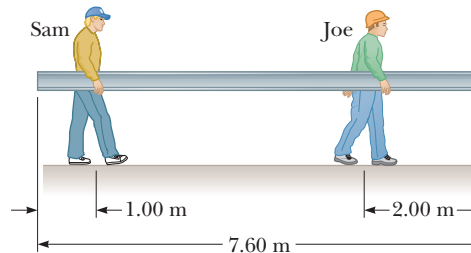


Figure P12.11

- 12.** A vaulter holds a 29.4-N pole in equilibrium by exerting an upward force \vec{U} with her leading hand and a downward force \vec{D} with her trailing hand as shown in Figure P12.12. Point C is the center of gravity of the pole. What are the magnitudes of (a) \vec{U} and (b) \vec{D} ?

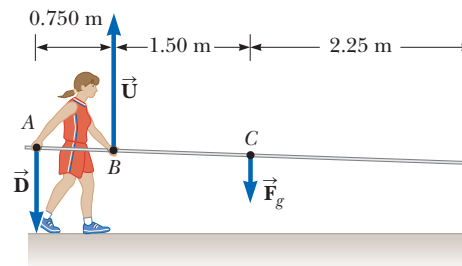


Figure P12.12

- 13.** A 15.0-m uniform ladder weighing 500 N rests against a frictionless wall. The ladder makes a 60.0° angle with the horizontal. (a) Find the horizontal and vertical forces the ground exerts on the base of the ladder when an 800-N firefighter has climbed 4.00 m along the ladder from the bottom. (b) If the ladder is just on the verge of slipping when the firefighter is 9.00 m from the bottom, what is the coefficient of static friction between ladder and ground?

- 14.** A uniform ladder of length L and mass m_1 rests against a frictionless wall. The ladder makes an angle θ with the horizontal. (a) Find the horizontal and vertical forces the ground exerts on the base of the ladder when a firefighter of mass m_2 has climbed a distance x along the ladder from the bottom. (b) If the ladder is just on the verge of slipping when the firefighter is a distance d along the ladder from the bottom, what is the coefficient of static friction between ladder and ground?

- 15.** A flexible chain weighing 40.0 N hangs between two hooks located at the same height (Fig. P12.15). At each hook, the tangent to the chain makes an angle $\theta = 42.0^\circ$ with the horizontal. Find (a) the magnitude of the force each hook exerts on the chain and (b) the




Figure P12.15

tension in the chain at its midpoint. *Suggestion:* For part (b), make a force diagram for half of the chain.

16. A uniform beam of length L and mass m shown in Figure P12.16 is inclined at an angle θ to the horizontal. Its upper end is connected to a wall by a rope, and its lower end rests on a rough, horizontal surface. The coefficient of static friction between the beam and surface is μ_s . Assume the angle θ is such that the static friction force is at its *maximum* value. (a) Draw a force diagram for the beam. (b) Using the condition of rotational equilibrium, find an expression for the tension T in the rope in terms of m , g , and θ . (c) Using the condition of translational equilibrium, find a second expression for T in terms of μ_s , m , and g . (d) Using the results from parts (a) through (c), obtain an expression for μ_s involving only the angle θ . (e) What happens if the ladder is lifted upward and its base is placed back on the ground slightly to the left of its position in Figure P12.16? Explain.

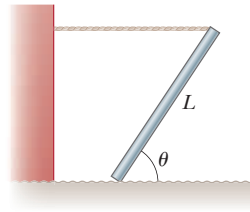


Figure P12.16

17. Figure P12.17 shows a claw hammer being used to pull a nail out of a horizontal board. The mass of the hammer is 1.00 kg. A force of 150 N is exerted horizontally as shown, and the nail does not yet move relative to the board. Find (a) the force exerted by the hammer claws on the nail and (b) the force exerted by the surface on the point of contact with the hammer head. Assume the force the hammer exerts on the nail is parallel to the nail.

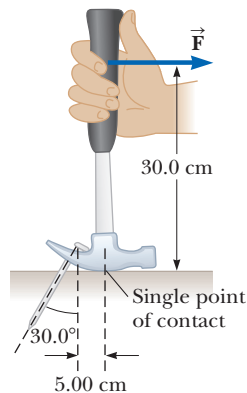


Figure P12.17

18. A 20.0-kg floodlight in a park is supported at the end of a horizontal beam of negligible mass that is hinged to a pole as shown in Figure P12.18. A cable at an angle of $\theta = 30.0^\circ$ with the beam helps support the light. (a) Draw a force diagram for the beam. By computing torques about an axis at the hinge at the left-hand end of the beam, find (b) the tension in the cable, (c) the horizontal component of the force exerted by the pole on the beam, and (d) the

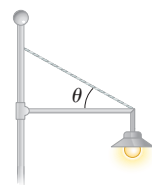


Figure P12.18

vertical component of this force. Now solve the same problem from the force diagram from part (a) by computing torques around the junction between the cable and the beam at the right-hand end of the beam. Find (e) the vertical component of the force exerted by the pole on the beam, (f) the tension in the cable, and (g) the horizontal component of the force exerted by the pole on the beam. (h) Compare the solution to parts (b) through (d) with the solution to parts (e) through (g). Is either solution more accurate?

19. Sir Lost-a-Lot dons his armor and sets out from the castle on his trusty steed (Fig. P12.19). Usually, the drawbridge is lowered to a horizontal position so that the end of the bridge rests on the stone ledge. Unfortunately, Lost-a-Lot's squire didn't lower the drawbridge far enough and stopped it at $\theta = 20.0^\circ$ above the horizontal. The knight and his horse stop when their combined center of mass is $d = 1.00$ m from the end of the bridge. The uniform bridge is $\ell = 8.00$ m long and has mass 2 000 kg. The lift cable is attached to the bridge 5.00 m from the hinge at the castle end and to a point on the castle wall $h = 12.0$ m above the bridge. Lost-a-Lot's mass combined with his armor and steed is 1 000 kg. Determine (a) the tension in the cable and (b) the horizontal and (c) the vertical force components acting on the bridge at the hinge.

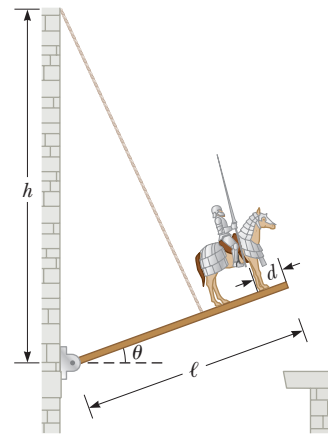


Figure P12.19 Problems 19 and 20.

20. **Review.** While Lost-a-Lot ponders his next move in the situation described in Problem 19 and illustrated in Figure P12.19, the enemy attacks! An incoming projectile breaks off the stone ledge so that the end of the drawbridge can be lowered past the wall where it usually rests. In addition, a fragment of the projectile bounces up and cuts the drawbridge cable! The hinge between the castle wall and the bridge is frictionless, and the bridge swings down freely until it is vertical and smacks into the vertical castle wall below the castle entrance. (a) How long does Lost-a-Lot stay in contact with the bridge while it swings downward? (b) Find the angular acceleration of the bridge just as it starts to move. (c) Find the angular speed of the bridge when it strikes the wall below the hinge. Find the force exerted by the hinge on the bridge (d) immediately after the cable breaks and (e) immediately before it strikes the castle wall.

21. John is pushing his daughter Rachel in a wheelbarrow when it is stopped by a brick 8.00 cm high (Fig. P12.21). The handles make an angle of $\theta = 15.0^\circ$ with the ground. Due to the weight of Rachel and the wheelbarrow, a downward force of 400 N is exerted at the center of the wheel, which has a radius of 20.0 cm. (a) What force must John apply along the handles to just start the wheel over the brick? (b) What is the force (magnitude and direction) that the brick exerts on the wheel just as the wheel begins to lift over the brick? In both parts, assume the brick remains fixed and does not slide along the ground. Also assume the force applied by John is directed exactly toward the center of the wheel.

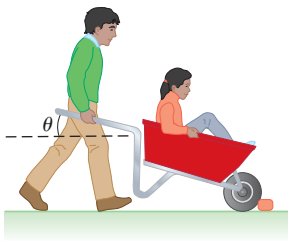


Figure P12.21 Problems 21 and 22.

22. John is pushing his daughter Rachel in a wheelbarrow when it is stopped by a brick of height h (Fig. P12.21). The handles make an angle of θ with the ground. Due to the weight of Rachel and the wheelbarrow, a downward force mg is exerted at the center of the wheel, which has a radius R . (a) What force F must John apply along the handles to just start the wheel over the brick? (b) What are the components of the force that the brick exerts on the wheel just as the wheel begins to lift over the brick? In both parts, assume the brick remains fixed and does not slide along the ground. Also assume the force applied by John is directed exactly toward the center of the wheel.
23. One end of a uniform 4.00-m-long rod of weight F_g is supported by a cable at an angle of $\theta = 37^\circ$ with the rod. The other end rests against the wall, where it is held by friction as shown in Figure P12.23. The coefficient of static friction between the wall and the rod is $\mu_s = 0.500$. Determine the minimum distance x from point A at which an additional object, also with the same weight F_g , can be hung without causing the rod to slip at point A.

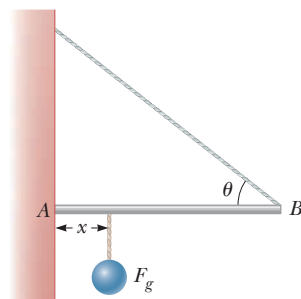


Figure P12.23

24. A 10.0-kg monkey climbs a uniform ladder with weight 1.20×10^2 N and length $L = 3.00$ m as shown in Figure P12.24. The ladder rests against the wall

and makes an angle of $\theta = 60.0^\circ$ with the ground. The upper and lower ends of the ladder rest on frictionless surfaces. The lower end is connected to the wall by a horizontal rope that is frayed and can support a maximum tension of only 80.0 N. (a) Draw a force diagram for the ladder. (b) Find the normal force exerted on the bottom of the ladder. (c) Find the tension in the rope when the monkey is two-thirds of the way up the ladder. (d) Find the maximum distance d that the monkey can climb up the ladder before the rope breaks. (e) If the horizontal surface were rough and the rope were removed, how would your analysis of the problem change? What other information would you need to answer parts (c) and (d)?




Figure P12.24

25. A uniform plank of length 2.00 m and mass 30.0 kg is supported by three ropes as indicated by the blue vectors in Figure P12.25. Find the tension in each rope when a 700-N person is $d = 0.500$ m from the left end.

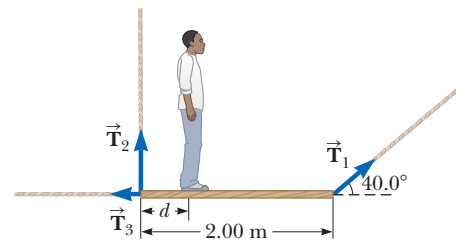


Figure P12.25

Section 12.4 Elastic Properties of Solids

26. A steel wire of diameter 1 mm can support a tension of 0.2 kN. A steel cable to support a tension of 20 kN should have diameter of what order of magnitude?
27. The deepest point in the ocean is in the Mariana Trench, about 11 km deep, in the Pacific. The pressure at this depth is huge, about 1.13×10^8 N/m². (a) Calculate the change in volume of 1.00 m³ of seawater carried from the surface to this deepest point. (b) The density of seawater at the surface is 1.03×10^3 kg/m³. Find its density at the bottom. (c) Explain whether or when it is a good approximation to think of water as incompressible.
28. Assume Young's modulus for bone is 1.50×10^{10} N/m². The bone breaks if stress greater than 1.50×10^8 N/m² is imposed on it. (a) What is the maximum force that can be exerted on the femur bone in the leg if it has a minimum effective diameter of 2.50 cm? (b) If this much force is applied compressively, by how much does the 25.0-cm-long bone shorten?
29. A child slides across a floor in a pair of rubber-soled shoes. The friction force acting on each foot is 20.0 N. The footprint area of each shoe sole is 14.0 cm², and the thickness of each sole is 5.00 mm. Find the horizontal distance by which the upper and lower surfaces of each sole are offset. The shear modulus of the rubber is 3.00 MN/m².

30. Evaluate Young's modulus for the material whose stress-strain curve is shown in Figure 12.12.

31. Assume if the shear stress in steel exceeds about $4.00 \times 10^8 \text{ N/m}^2$, the steel ruptures. Determine the shearing force necessary to (a) shear a steel bolt 1.00 cm in diameter and (b) punch a 1.00-cm-diameter hole in a steel plate 0.500 cm thick.

32. When water freezes, it expands by about 9.00%. What pressure increase would occur inside your automobile engine block if the water in it froze? (The bulk modulus of ice is $2.00 \times 10^9 \text{ N/m}^2$.)

33. A 200-kg load is hung on a wire of length 4.00 m, cross-sectional area $0.200 \times 10^{-4} \text{ m}^2$, and Young's modulus $8.00 \times 10^{10} \text{ N/m}^2$. What is its increase in length?

34. A walkway suspended across a hotel lobby is supported at numerous points along its edges by a vertical cable above each point and a vertical column underneath. The steel cable is 1.27 cm in diameter and is 5.75 m long before loading. The aluminum column is a hollow cylinder with an inside diameter of 16.14 cm, an outside diameter of 16.24 cm, and an unloaded length of 3.25 m. When the walkway exerts a load force of 8 500 N on one of the support points, how much does the point move down?

35. **Review.** A 2.00-m-long cylindrical steel wire with a cross-sectional diameter of 4.00 mm is placed over a light, frictionless pulley. An object of mass $m_1 = 5.00 \text{ kg}$ is hung from one end of the wire and an object of mass $m_2 = 3.00 \text{ kg}$ from the other end as shown in Figure P12.35. The objects are released and allowed to move freely. Compared with its length before the objects were attached, by how much has the wire stretched while the objects are in motion?



Figure P12.35

36. **Review.** A 30.0-kg hammer, moving with speed 20.0 m/s, strikes a steel spike 2.30 cm in diameter. The hammer rebounds with speed 10.0 m/s after 0.110 s. What is the average strain in the spike during the impact?

Additional Problems

37. A bridge of length 50.0 m and mass $8.00 \times 10^4 \text{ kg}$ is supported on a smooth pier at each end as shown in Figure P12.37. A truck of mass $3.00 \times 10^4 \text{ kg}$ is located 15.0 m from one end. What are the forces on the bridge at the points of support?

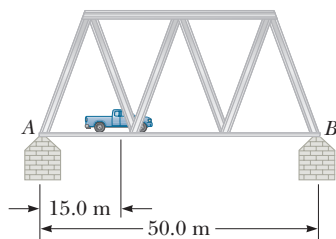


Figure P12.37

38. A uniform beam resting on two pivots has a length $L = 6.00 \text{ m}$ and mass $M = 90.0 \text{ kg}$. The pivot under the left

end exerts a normal force n_1 on the beam, and the second pivot located a distance $\ell = 4.00 \text{ m}$ from the left end exerts a normal force n_2 . A woman of mass $m = 55.0 \text{ kg}$ steps onto the left end of the beam and begins walking to the right as in Figure P12.38. The goal is to find the woman's position when the beam begins to tip. (a) What is the appropriate analysis model for the beam before it begins to tip? (b) Sketch a force diagram for the beam, labeling the gravitational and normal forces acting on the beam and placing the woman a distance x to the right of the first pivot, which is the origin. (c) Where is the woman when the normal force n_1 is the greatest? (d) What is n_1 when the beam is about to tip? (e) Use Equation 12.1 to find the value of n_2 when the beam is about to tip. (f) Using the result of part (d) and Equation 12.2, with torques computed around the second pivot, find the woman's position x when the beam is about to tip. (g) Check the answer to part (e) by computing torques around the first pivot point.

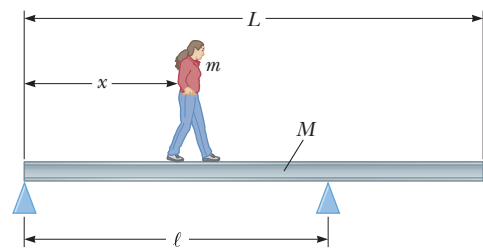


Figure P12.38

39. In exercise physiology studies, it is sometimes important to determine the location of a person's center of mass. This determination can be done with the arrangement shown in Figure P12.39. A light plank rests on two scales, which read $F_{g1} = 380 \text{ N}$ and $F_{g2} = 320 \text{ N}$. A distance of 1.65 m separates the scales. How far from the woman's feet is her center of mass?

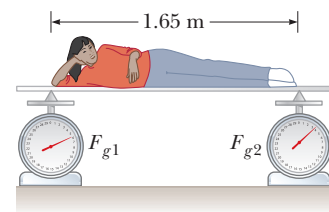


Figure P12.39

40. The lintel of prestressed reinforced concrete in Figure P12.40 is 1.50 m long. The concrete encloses one steel reinforcing rod with cross-sectional area 1.50 cm^2 . The rod joins two strong end plates. The cross-sectional area of the concrete perpendicular to the rod is 50.0 cm^2 . Young's modulus for the concrete is $30.0 \times 10^9 \text{ N/m}^2$. After the concrete cures and the original tension T_1 in the rod is released, the concrete is to be under compressive stress $8.00 \times 10^6 \text{ N/m}^2$. (a) By what distance will the rod compress the concrete when the original tension in the rod is released? (b) What

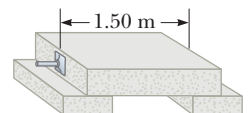


Figure P12.40

is the new tension T_2 in the rod? (c) The rod will then be how much longer than its unstressed length? (d) When the concrete was poured, the rod should have been stretched by what extension distance from its unstressed length? (e) Find the required original tension T_1 in the rod.

41. The arm in Figure P12.41 weighs 41.5 N. The gravitational force on the arm acts through point A . Determine the magnitudes of the tension force \vec{F}_t in the deltoid muscle and the force \vec{F}_s exerted by the shoulder on the humerus (upper-arm bone) to hold the arm in the position shown.

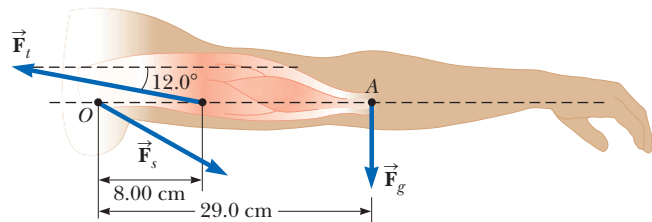


Figure P12.41

42. When a person stands on tiptoe on one foot (a strenuous position), the position of the foot is as shown in Figure P12.42a. The total gravitational force \vec{F}_g on the body is supported by the normal force \vec{n} exerted by the floor on the toes of one foot. A mechanical model of the situation is shown in Figure P12.42b, where \vec{T} is the force exerted on the foot by the Achilles tendon and \vec{R} is the force exerted on the foot by the tibia. Find the values of T , R , and θ when $F_g = 700$ N.

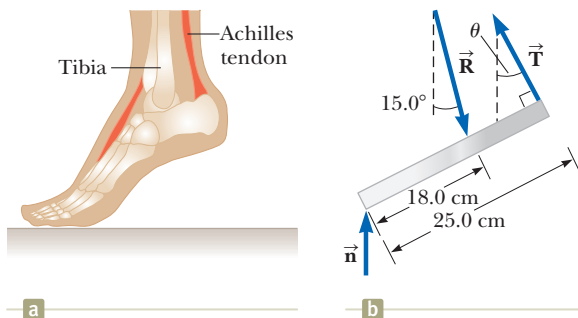


Figure P12.42

43. **AMT** A hungry bear weighing 700 N walks out on a beam in an attempt to retrieve a basket of goodies hanging at the end of the beam (Fig. P12.43). The beam is uni-

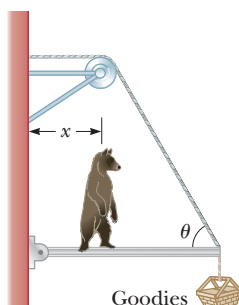


Figure P12.43

form, weighs 200 N, and is 6.00 m long, and it is supported by a wire at an angle of $\theta = 60.0^\circ$. The basket weighs 80.0 N. (a) Draw a force diagram for the beam. (b) When the bear is at $x = 1.00$ m, find the tension in the wire supporting the beam and the components of the force exerted by the wall on the left end of the beam. (c) **What If?** If the wire can withstand a maximum tension of 900 N, what is the maximum distance the bear can walk before the wire breaks?

44. The following equations are obtained from a force diagram of a rectangular farm gate, supported by two hinges on the left-hand side. A bucket of grain is hanging from the latch.

$$\begin{aligned}
 -A + C &= 0 \\
 +B - 392 \text{ N} - 50.0 \text{ N} &= 0 \\
 A(0) + B(0) + C(1.80 \text{ m}) - 392 \text{ N}(1.50 \text{ m}) \\
 - 50.0 \text{ N}(3.00 \text{ m}) &= 0
 \end{aligned}$$

(a) Draw the force diagram and complete the statement of the problem, specifying the unknowns. (b) Determine the values of the unknowns and state the physical meaning of each.

45. A uniform sign of weight F_g and width $2L$ hangs from a light, horizontal beam hinged at the wall and supported by a cable (Fig. P12.45). Determine (a) the tension in the cable and (b) the components of the reaction force exerted by the wall on the beam in terms of F_g , d , L , and θ .

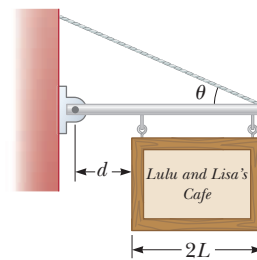


Figure P12.45

46. A 1 200-N uniform boom at $\phi = 65^\circ$ to the vertical is supported by a cable at an angle $\theta = 25.0^\circ$ to the horizontal as shown in Figure P12.46. The boom is pivoted at the bottom, and an object of weight $m = 2\,000$ N hangs from its top. Find (a) the tension in the support cable and (b) the components of the reaction force exerted by the floor on the boom.

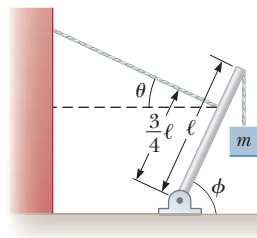


Figure P12.46

47. A crane of mass $m_1 = 3\,000$ kg supports a load of mass $m_2 = 10\,000$ kg as shown in Figure P12.47. The crane

is pivoted with a frictionless pin at A and rests against a smooth support at B . Find the reaction forces at (a) point A and (b) point B .

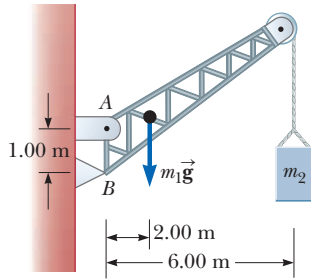


Figure P12.47

48. Assume a person bends forward to lift a load “with his back” as shown in Figure P12.48a. The spine pivots mainly at the fifth lumbar vertebra, with the principal supporting force provided by the erector spinalis muscle in the back. To see the magnitude of the forces involved, consider the model shown in Figure P12.48b for a person bending forward to lift a 200-N object. The spine and upper body are represented as a uniform horizontal rod of weight 350 N, pivoted at the base of the spine. The erector spinalis muscle, attached at a point two-thirds of the way up the spine, maintains the position of the back. The angle between the spine and this muscle is $\theta = 12.0^\circ$. Find (a) the tension T in the back muscle and (b) the compressional force in the spine. (c) Is this method a good way to lift a load? Explain your answer, using the results of parts (a) and (b). (d) Can you suggest a better method to lift a load?

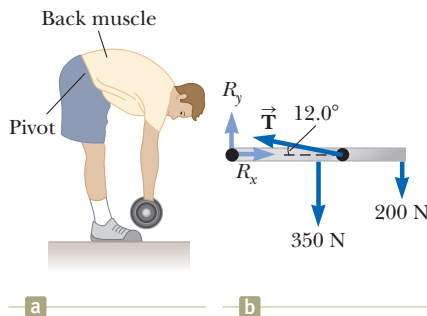


Figure P12.48

49. A 10 000-N shark is supported by a rope attached to a 4.00-m rod that can pivot at the base. (a) Calculate the tension in the cable between the rod and the wall, assuming the cable is holding the system in the position shown in Figure P12.49. Find (b) the horizontal force and (c) the vertical force exerted on the base of the rod. Ignore the weight of the rod.

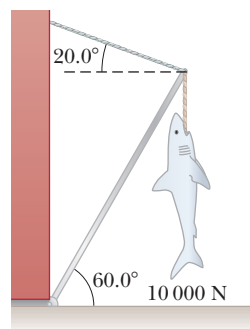


Figure P12.49

50. Why is the following situation impossible? A worker in a factory pulls a cabinet across the floor using a rope as

shown in Figure P12.50a. The rope makes an angle $\theta = 37.0^\circ$ with the floor and is tied $h_1 = 10.0$ cm from the bottom of the cabinet. The uniform rectangular cabinet has height $\ell = 100$ cm and width $w = 60.0$ cm, and it weighs 400 N. The cabinet slides with constant speed when a force $F = 300$ N is applied through the rope. The worker tires of walking backward. He fastens the rope to a point on the cabinet $h_2 = 65.0$ cm off the floor and lays the rope over his shoulder so that he can walk forward and pull as shown in Figure P12.50b. In this way, the rope again makes an angle of $\theta = 37.0^\circ$ with the horizontal and again has a tension of 300 N. Using this technique, the worker is able to slide the cabinet over a long distance on the floor without tiring.

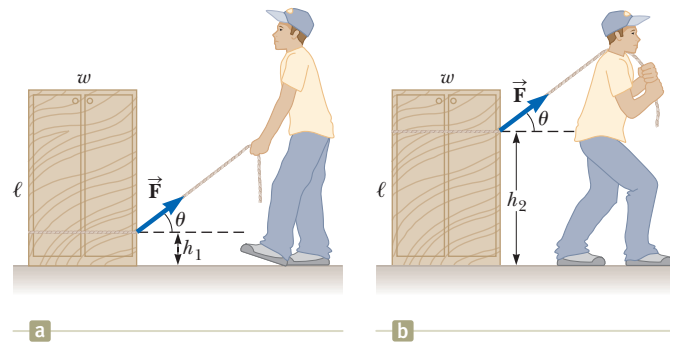


Figure P12.50 Problems 50 and 62.

51. A uniform beam of mass m is inclined at an angle θ to the horizontal. Its upper end (point P) produces a 90° bend in a very rough rope tied to a wall, and its lower end rests on a rough floor (Fig. P12.51). Let μ_s represent the coefficient of static friction between beam and floor. Assume μ_s is less than the cotangent of θ . (a) Find an expression for the maximum mass M that can be suspended from the top before the beam slips. Determine (b) the magnitude of the reaction force at the floor and (c) the magnitude of the force exerted by the beam on the rope at P in terms of m , M , and μ_s .

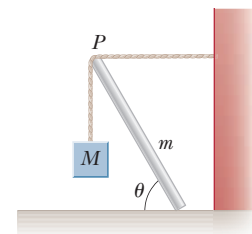


Figure P12.51

52. The large quadriceps muscle in the upper leg terminates at its lower end in a tendon attached to the upper end of the tibia (Fig. P12.52a, page 386). The forces on the lower leg when the leg is extended are modeled as in Figure P12.52b, where \vec{T} is the force in the tendon, $\vec{F}_{g,\text{leg}}$ is the gravitational force acting on the lower leg, and $\vec{F}_{g,\text{foot}}$ is the gravitational force acting on the foot. Find T when the tendon is at an angle of $\phi = 25.0^\circ$ with the tibia, assuming $F_{g,\text{leg}} = 30.0$ N, $F_{g,\text{foot}} = 12.5$ N, and the leg is extended at an angle $\theta = 40.0^\circ$ with respect to the vertical. Also assume the center of gravity of the

tibia is at its geometric center and the tendon attaches to the lower leg at a position one-fifth of the way down the leg.

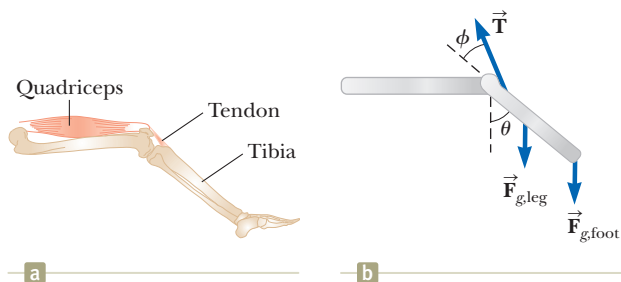


Figure P12.52

53. When a gymnast performing on the rings executes the *iron cross*, he maintains the position at rest shown in Figure P12.53a. In this maneuver, the gymnast's feet (not shown) are off the floor. The primary muscles involved in supporting this position are the latissimus dorsi ("lats") and the pectoralis major ("pecs"). One of the rings exerts an upward force \vec{F}_h on a hand as shown in Figure P12.53b. The force \vec{F}_s is exerted by the shoulder joint on the arm. The latissimus dorsi and pectoralis major muscles exert a total force \vec{F}_m on the arm. (a) Using the information in the figure, find the magnitude of the force \vec{F}_m for an athlete of weight 750 N. (b) Suppose an athlete in training cannot perform the iron cross but can hold a position similar to the figure in which the arms make a 45° angle with the horizontal rather than being horizontal. Why is this position easier for the athlete?

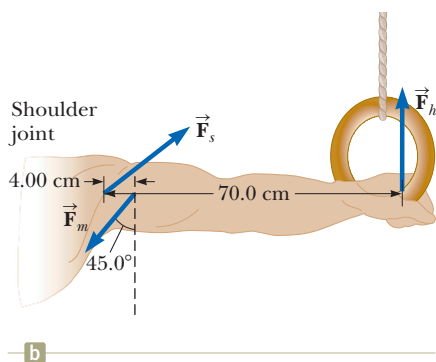



Figure P12.53

54. Figure P12.54 shows a light truss formed from three struts lying in a plane and joined by three smooth hinge pins at their ends. The truss supports a downward force of $\vec{F} = 1000$ N applied at the point B . The truss has negligible weight. The piers at A and C

are smooth. (a) Given $\theta_1 = 30.0^\circ$ and $\theta_2 = 45.0^\circ$, find n_A and n_C . (b) One can show that the force any strut exerts on a pin must be directed along the length of the strut as a force of tension or compression. Use that fact to identify the directions of the forces that the struts exert on the pins joining them. Find the force of tension or of compression in each of the three bars.

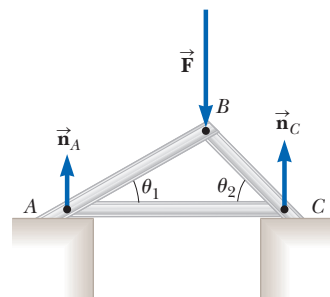


Figure P12.54

55. One side of a plant shelf is supported by a bracket mounted on a vertical wall as shown in Figure P12.55. Ignore the weight of the bracket. (a) Find the horizontal component of the force that the screw exerts on the bracket when an 80.0 N vertical force is applied as shown. (b) As your grandfather waters his geraniums, the 80.0-N load force is increasing at the rate 0.150 N/s. At what rate is the force exerted by the screw changing? *Suggestion:* Imagine that the bracket is slightly loose.

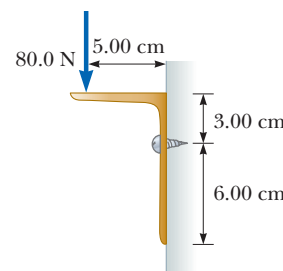
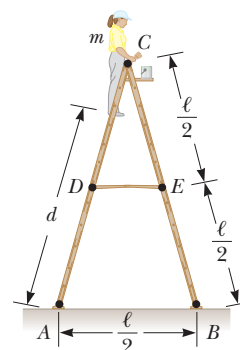


Figure P12.55

56. A stepladder of negligible weight is constructed as shown in Figure P12.56, with $AC = BC = \ell = 4.00$ m. A painter of mass $m = 70.0$ kg stands on the ladder $d = 3.00$ m from the bottom. Assuming the floor is frictionless, find (a) the tension in the horizontal bar DE connecting the two halves of the ladder, (b) the normal forces at A and B , and (c) the components of the reaction force at the single hinge C that the left half of the ladder exerts on the right half. *Suggestion:* Treat the ladder as a single object, but also treat each half of the ladder separately.

Figure P12.56
Problems 56 and 57.

57. A stepladder of negligible weight is constructed as shown in Figure P12.56, with $AC = BC = \ell$. A painter of mass m stands on the ladder a distance d from the bottom. Assuming the floor is frictionless, find (a) the tension in the horizontal bar DE connecting the two

halves of the ladder, (b) the normal forces at A and B , and (c) the components of the reaction force at the single hinge C that the left half of the ladder exerts on the right half. *Suggestion:* Treat the ladder as a single object, but also treat each half of the ladder separately.

58. (a) Estimate the force with which a karate master strikes a board, assuming the hand's speed at the moment of impact is 10.0 m/s and decreases to 1.00 m/s during a 0.002 00-s time interval of contact between the hand and the board. The mass of his hand and arm is 1.00 kg. (b) Estimate the shear stress, assuming this force is exerted on a 1.00-cm-thick pine board that is 10.0 cm wide. (c) If the maximum shear stress a pine board can support before breaking is 3.60×10^6 N/m², will the board break?
59. Two racquetballs, each having a mass of 170 g, are placed in a glass jar as shown in Figure P12.59. Their centers lie on a straight line that makes a 45° angle with the horizontal. (a) Assume the walls are frictionless and determine P_1 , P_2 , and P_3 . (b) Determine the magnitude of the force exerted by the left ball on the right ball.

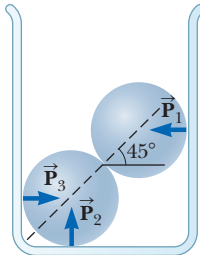


Figure P12.59

60. **Review.** A wire of length L , Young's modulus Y , and cross-sectional area A is stretched elastically by an amount ΔL . By Hooke's law, the restoring force is $-k \Delta L$. (a) Show that $k = YA/L$. (b) Show that the work done in stretching the wire by an amount ΔL is $W = \frac{1}{2}YA(\Delta L)^2/L$.
61. **Review.** An aluminum wire is 0.850 m long and has a circular cross section of diameter 0.780 mm. Fixed at the top end, the wire supports a 1.20-kg object that swings in a horizontal circle. Determine the angular speed of the object required to produce a strain of 1.00×10^{-3} .
62. Consider the rectangular cabinet of Problem 50 shown in Figure P12.50, but with a force \vec{F} applied horizontally at the upper edge. (a) What is the minimum force required to start to tip the cabinet? (b) What is the minimum coefficient of static friction required for the cabinet not to slide with the application of a force of this magnitude? (c) Find the magnitude and direction of the minimum force required to tip the cabinet if the point of application can be chosen *anywhere* on the cabinet.

63. **M** A 500-N uniform rectangular sign 4.00 m wide and 3.00 m high is suspended from a horizontal, 6.00-m-long, uniform, 100-N rod as indicated in Figure P12.63. The left end of the rod is supported by a hinge, and the right end is supported by a thin cable making a 30.0° angle with the vertical. (a) Find the tension T in the cable. (b) Find the horizontal and vertical compo-

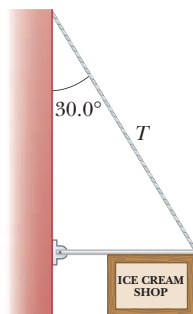


Figure P12.63

nents of force exerted on the left end of the rod by the hinge.

64. A steel cable 3.00 cm² in cross-sectional area has a mass of 2.40 kg per meter of length. If 500 m of the cable is hung over a vertical cliff, how much does the cable stretch under its own weight? Take $Y_{\text{steel}} = 2.00 \times 10^{11}$ N/m².

Challenge Problems

65. A uniform pole is propped between the floor and the ceiling of a room. The height of the room is 7.80 ft, and the coefficient of static friction between the pole and the ceiling is 0.576. The coefficient of static friction between the pole and the floor is greater than that between the pole and the ceiling. What is the length of the longest pole that can be propped between the floor and the ceiling?
66. In the What If? section of Example 12.2, let d represent the distance in meters between the person and the hinge at the left end of the beam. (a) Show that the cable tension is given by $T = 93.9d + 125$, with T in newtons. (b) Show that the direction angle θ of the hinge force is described by

$$\tan \theta = \left(\frac{32}{3d + 4} - 1 \right) \tan 53.0^\circ$$

- (c) Show that the magnitude of the hinge force is given by

$$R = \sqrt{8.82 \times 10^3 d^2 - 9.65 \times 10^4 d + 4.96 \times 10^5}$$

- (d) Describe how the changes in T , θ , and R as d increases differ from one another.

67. Figure P12.67 shows a vertical force applied tangentially to a uniform cylinder of weight F_g . The coefficient of static friction between the cylinder and all surfaces is 0.500. The force \vec{P} is increased in magnitude until the cylinder begins to rotate. In terms of F_g , find the maximum force magnitude P that can be applied without causing the cylinder to rotate. *Suggestion:* Show that both friction forces will be at their maximum values when the cylinder is on the verge of slipping.

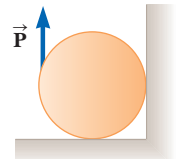


Figure P12.67

68. A uniform rod of weight F_g and length L is supported at its ends by a frictionless trough as shown in Figure P12.68. (a) Show that the center of gravity of the rod must be vertically over point O when the rod is in equilibrium. (b) Determine the equilibrium value of the angle θ . (c) Is the equilibrium of the rod stable or unstable?

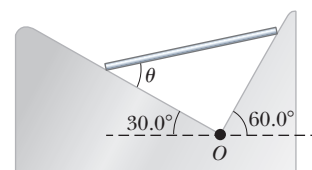


Figure P12.68

Universal Gravitation

- 13.1 Newton's Law of Universal Gravitation
- 13.2 Free-Fall Acceleration and the Gravitational Force
- 13.3 Analysis Model: Particle in a Field (Gravitational)
- 13.4 Kepler's Laws and the Motion of Planets
- 13.5 Gravitational Potential Energy
- 13.6 Energy Considerations in Planetary and Satellite Motion



Hubble Space Telescope image of the Whirlpool Galaxy, M51, taken in 2005. The arms of this spiral galaxy compress hydrogen gas and create new clusters of stars. Some astronomers believe that the arms are prominent due to a close encounter with the small, yellow galaxy, NGC 5195, at the tip of one of its arms. (NASA, Hubble Heritage Team, (STScI/AURA), ESA, S. Beckwith (STScI). Additional Processing: Robert Gendler)

Before 1687, a large amount of data had been collected on the motions of the Moon and the planets, but a clear understanding of the forces related to these motions was not available. In that year, Isaac Newton provided the key that unlocked the secrets of the heavens. He knew, from his first law, that a net force had to be acting on the Moon because without such a force the Moon would move in a straight-line path rather than in its almost circular orbit. Newton reasoned that this force was the gravitational attraction exerted by the Earth on the Moon. He realized that the forces involved in the Earth–Moon attraction and in the Sun–planet attraction were not something special to those systems, but rather were particular cases of a general and universal attraction between objects. In other words, Newton saw that the same force of attraction that causes the Moon to follow its path around the Earth also causes an apple to fall from a tree. It was the first time that “earthly” and “heavenly” motions were unified.

In this chapter, we study the law of universal gravitation. We emphasize a description of planetary motion because astronomical data provide an important test of this law's validity. We then show that the laws of planetary motion developed by Johannes Kepler follow from

the law of universal gravitation and the principle of conservation of angular momentum for an isolated system. We conclude by deriving a general expression for the gravitational potential energy of a system and examining the energetics of planetary and satellite motion.

13.1 Newton's Law of Universal Gravitation

You may have heard the legend that, while napping under a tree, Newton was struck on the head by a falling apple. This alleged accident supposedly prompted him to imagine that perhaps all objects in the Universe were attracted to each other in the same way the apple was attracted to the Earth. Newton analyzed astronomical data on the motion of the Moon around the Earth. From that analysis, he made the bold assertion that the force law governing the motion of planets was the *same* as the force law that attracted a falling apple to the Earth.

In 1687, Newton published his work on the law of gravity in his treatise *Mathematical Principles of Natural Philosophy*. **Newton's law of universal gravitation** states that

every particle in the Universe attracts every other particle with a force that is directly proportional to the product of their masses and inversely proportional to the square of the distance between them.

If the particles have masses m_1 and m_2 and are separated by a distance r , the magnitude of this gravitational force is

$$F_g = G \frac{m_1 m_2}{r^2} \quad (13.1)$$

where G is a constant, called the *universal gravitational constant*. Its value in SI units is

$$G = 6.674 \times 10^{-11} \text{ N} \cdot \text{m}^2/\text{kg}^2 \quad (13.2)$$

The universal gravitational constant G was first evaluated in the late nineteenth century, based on results of an important experiment by Sir Henry Cavendish (1731–1810) in 1798. The law of universal gravitation was not expressed by Newton in the form of Equation 13.1, and Newton did not mention a constant such as G . In fact, even by the time of Cavendish, a unit of force had not yet been included in the existing system of units. Cavendish's goal was to measure the density of the Earth. His results were then used by other scientists 100 years later to generate a value for G .

Cavendish's apparatus consists of two small spheres, each of mass m , fixed to the ends of a light, horizontal rod suspended by a fine fiber or thin metal wire as illustrated in Figure 13.1. When two large spheres, each of mass M , are placed near the smaller ones, the attractive force between smaller and larger spheres causes the rod to rotate and twist the wire suspension to a new equilibrium orientation. The angle of rotation is measured by the deflection of a light beam reflected from a mirror attached to the vertical suspension.

The form of the force law given by Equation 13.1 is often referred to as an **inverse-square law** because the magnitude of the force varies as the inverse square of the separation of the particles.¹ We shall see other examples of this type of force law in subsequent chapters. We can express this force in vector form by defining a unit vector \hat{r}_{12} (Fig. 13.2). Because this unit vector is directed from particle 1 toward particle 2, the force exerted by particle 1 on particle 2 is

$$\vec{F}_{12} = -G \frac{m_1 m_2}{r^2} \hat{r}_{12} \quad (13.3)$$

¹An *inverse* proportionality between two quantities x and y is one in which $y = k/x$, where k is a constant. A *direct* proportion between x and y exists when $y = kx$.

◀ The law of universal gravitation

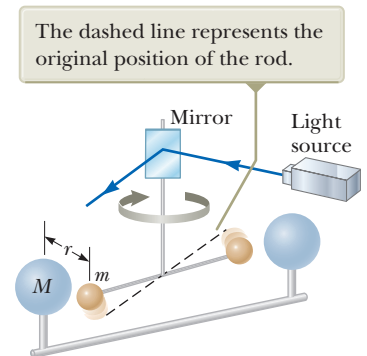


Figure 13.1 Cavendish apparatus for measuring gravitational forces.

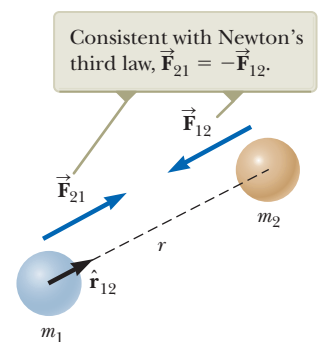


Figure 13.2 The gravitational force between two particles is attractive. The unit vector \hat{r}_{12} is directed from particle 1 toward particle 2.

where the negative sign indicates that particle 2 is attracted to particle 1; hence, the force on particle 2 must be directed toward particle 1. By Newton's third law, the force exerted by particle 2 on particle 1, designated \vec{F}_{21} , is equal in magnitude to \vec{F}_{12} and in the opposite direction. That is, these forces form an action-reaction pair, and $\vec{F}_{21} = -\vec{F}_{12}$.

Two features of Equation 13.3 deserve mention. First, the gravitational force is a field force that always exists between two particles, regardless of the medium that separates them. Second, because the force varies as the inverse square of the distance between the particles, it decreases rapidly with increasing separation.

Equation 13.3 can also be used to show that the gravitational force exerted by a finite-size, spherically symmetric mass distribution on a particle outside the distribution is the same as if the entire mass of the distribution were concentrated at the center. For example, the magnitude of the force exerted by the Earth on a particle of mass m near the Earth's surface is

$$F_g = G \frac{M_E m}{R_E^2} \quad (13.4)$$

where M_E is the Earth's mass and R_E its radius. This force is directed toward the center of the Earth.

- Quick Quiz 13.1** A planet has two moons of equal mass. Moon 1 is in a circular orbit of radius r . Moon 2 is in a circular orbit of radius $2r$. What is the magnitude of the gravitational force exerted by the planet on Moon 2? (a) four times as large as that on Moon 1 (b) twice as large as that on Moon 1 (c) equal to that on Moon 1 (d) half as large as that on Moon 1 (e) one-fourth as large as that on Moon 1

Pitfall Prevention 13.1

Be Clear on g and G The symbol g represents the magnitude of the free-fall acceleration near a planet. At the surface of the Earth, g has an average value of 9.80 m/s^2 . On the other hand, G is a universal constant that has the same value everywhere in the Universe.

Example 13.1 Billiards, Anyone?

Three 0.300-kg billiard balls are placed on a table at the corners of a right triangle as shown in Figure 13.3. The sides of the triangle are of lengths $a = 0.400 \text{ m}$, $b = 0.300 \text{ m}$, and $c = 0.500 \text{ m}$. Calculate the gravitational force vector on the cue ball (designated m_1) resulting from the other two balls as well as the magnitude and direction of this force.

SOLUTION

Conceptualize Notice in Figure 13.3 that the cue ball is attracted to both other balls by the gravitational force. We can see graphically that the net force should point upward and toward the right. We locate our coordinate axes as shown in Figure 13.3, placing our origin at the position of the cue ball.

Categorize This problem involves evaluating the gravitational forces on the cue ball using Equation 13.3. Once these forces are evaluated, it becomes a vector addition problem to find the net force.

Analyze Find the force exerted by m_2 on the cue ball:

$$\begin{aligned} \vec{F}_{21} &= G \frac{m_2 m_1}{a^2} \hat{\mathbf{j}} \\ &= (6.674 \times 10^{-11} \text{ N} \cdot \text{m}^2/\text{kg}^2) \frac{(0.300 \text{ kg})(0.300 \text{ kg})}{(0.400 \text{ m})^2} \hat{\mathbf{j}} \\ &= 3.75 \times 10^{-11} \text{ N} \hat{\mathbf{j}} \end{aligned}$$

Find the force exerted by m_3 on the cue ball:

$$\begin{aligned} \vec{F}_{31} &= G \frac{m_3 m_1}{b^2} \hat{\mathbf{i}} \\ &= (6.674 \times 10^{-11} \text{ N} \cdot \text{m}^2/\text{kg}^2) \frac{(0.300 \text{ kg})(0.300 \text{ kg})}{(0.300 \text{ m})^2} \hat{\mathbf{i}} \\ &= 6.67 \times 10^{-11} \text{ N} \hat{\mathbf{i}} \end{aligned}$$

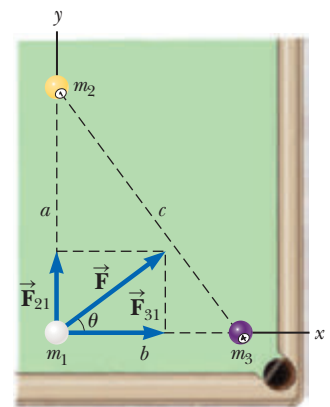


Figure 13.3 (Example 13.1) The resultant gravitational force acting on the cue ball is the vector sum $\vec{F}_{21} + \vec{F}_{31}$.

▶ 13.1 continued

Find the net gravitational force on the cue ball by adding these force vectors:

$$\vec{F} = \vec{F}_{31} + \vec{F}_{21} = (6.67 \hat{i} + 3.75 \hat{j}) \times 10^{-11} \text{ N}$$

Find the magnitude of this force:

$$F = \sqrt{F_{31}^2 + F_{21}^2} = \sqrt{(6.67)^2 + (3.75)^2} \times 10^{-11} \text{ N} = 7.66 \times 10^{-11} \text{ N}$$

Find the tangent of the angle θ for the net force vector:

$$\tan \theta = \frac{F_y}{F_x} = \frac{F_{21}}{F_{31}} = \frac{3.75 \times 10^{-11} \text{ N}}{6.67 \times 10^{-11} \text{ N}} = 0.562$$

Evaluate the angle θ :

$$\theta = \tan^{-1}(0.562) = 29.4^\circ$$

Finalize The result for F shows that the gravitational forces between everyday objects have extremely small magnitudes.

13.2 Free-Fall Acceleration and the Gravitational Force

We have called the magnitude of the gravitational force on an object near the Earth’s surface the *weight* of the object, where the weight is given by Equation 5.6. Equation 13.4 is another expression for this force. Therefore, we can set Equations 5.6 and 13.4 equal to each other to obtain

$$mg = G \frac{M_E m}{R_E^2}$$

$$g = G \frac{M_E}{R_E^2} \tag{13.5}$$

Equation 13.5 relates the free-fall acceleration g to physical parameters of the Earth—its mass and radius—and explains the origin of the value of 9.80 m/s^2 that we have used in earlier chapters. Now consider an object of mass m located a distance h above the Earth’s surface or a distance r from the Earth’s center, where $r = R_E + h$. The magnitude of the gravitational force acting on this object is

$$F_g = G \frac{M_E m}{r^2} = G \frac{M_E m}{(R_E + h)^2}$$

The magnitude of the gravitational force acting on the object at this position is also $F_g = mg$, where g is the value of the free-fall acceleration at the altitude h . Substituting this expression for F_g into the last equation shows that g is given by

$$g = \frac{GM_E}{r^2} = \frac{GM_E}{(R_E + h)^2} \tag{13.6}$$

Table 13.1 Free-Fall Acceleration g at Various Altitudes Above the Earth’s Surface

Altitude h (km)	g (m/s ²)
1 000	7.33
2 000	5.68
3 000	4.53
4 000	3.70
5 000	3.08
6 000	2.60
7 000	2.23
8 000	1.93
9 000	1.69
10 000	1.49
50 000	0.13
∞	0

◀ Variation of g with altitude

Therefore, it follows that g decreases with increasing altitude. Values of g for the Earth at various altitudes are listed in Table 13.1. Because an object’s weight is mg , we see that as $r \rightarrow \infty$, the weight of the object approaches zero.

- Quick Quiz 13.2** Superman stands on top of a very tall mountain and throws a baseball horizontally with a speed such that the baseball goes into a circular orbit around the Earth. While the baseball is in orbit, what is the magnitude of the acceleration of the ball? (a) It depends on how fast the baseball is thrown. (b) It is zero because the ball does not fall to the ground. (c) It is slightly less than 9.80 m/s^2 . (d) It is equal to 9.80 m/s^2 .

Example 13.2 The Density of the Earth

Using the known radius of the Earth and that $g = 9.80 \text{ m/s}^2$ at the Earth's surface, find the average density of the Earth.

SOLUTION

Conceptualize Assume the Earth is a perfect sphere. The density of material in the Earth varies, but let's adopt a simplified model in which we assume the density to be uniform throughout the Earth. The resulting density is the average density of the Earth.

Categorize This example is a relatively simple substitution problem.

Using Equation 13.5, solve for the mass of the Earth:

$$M_E = \frac{gR_E^2}{G}$$

Substitute this mass and the volume of a sphere into the definition of density (Eq. 1.1):

$$\rho_E = \frac{M_E}{V_E} = \frac{gR_E^2/G}{\frac{4}{3}\pi R_E^3} = \frac{3}{4} \frac{g}{\pi GR_E}$$

$$= \frac{3}{4} \frac{9.80 \text{ m/s}^2}{\pi(6.674 \times 10^{-11} \text{ N} \cdot \text{m}^2/\text{kg}^2)(6.37 \times 10^6 \text{ m})} = 5.50 \times 10^3 \text{ kg/m}^3$$

WHAT IF? What if you were told that a typical density of granite at the Earth's surface is $2.75 \times 10^3 \text{ kg/m}^3$? What would you conclude about the density of the material in the Earth's interior?

Answer Because this value is about half the density we calculated as an average for the entire Earth, we would conclude that the inner core of the Earth has a density much higher than the average value. It is most amazing that the Cavendish experiment—which can be used to determine G and can be done today on a tabletop—combined with simple free-fall measurements of g provides information about the core of the Earth!

13.3 Analysis Model: Particle in a Field (Gravitational)

When Newton published his theory of universal gravitation, it was considered a success because it satisfactorily explained the motion of the planets. It represented strong evidence that the same laws that describe phenomena on the Earth can be used on large objects like planets and throughout the Universe. Since 1687, Newton's theory has been used to account for the motions of comets, the deflection of a Cavendish balance, the orbits of binary stars, and the rotation of galaxies. Nevertheless, both Newton's contemporaries and his successors found it difficult to accept the concept of a force that acts at a distance. They asked how it was possible for two objects such as the Sun and the Earth to interact when they were not in contact with each other. Newton himself could not answer that question.

An approach to describing interactions between objects that are not in contact came well after Newton's death. This approach enables us to look at the gravitational interaction in a different way, using the concept of a **gravitational field** that exists at every point in space. When a particle is placed at a point where the gravitational field exists, the particle experiences a gravitational force. In other words, we imagine that the field exerts a force on the particle rather than consider a direct interaction between two particles. The gravitational field \vec{g} is defined as

Gravitational field ►

$$\vec{g} \equiv \frac{\vec{F}_g}{m_0} \quad (13.7)$$

That is, the gravitational field at a point in space equals the gravitational force \vec{F}_g experienced by a *test particle* placed at that point divided by the mass m_0 of the test particle. We call the object creating the field the *source particle*. (Although the Earth

is not a particle, it is possible to show that we can model the Earth as a particle for the purpose of finding the gravitational field that it creates.) Notice that the presence of the test particle is not necessary for the field to exist: the source particle creates the gravitational field. We can detect the presence of the field and measure its strength by placing a test particle in the field and noting the force exerted on it. In essence, we are describing the “effect” that any object (in this case, the Earth) has on the empty space around itself in terms of the force that *would* be present if a second object were somewhere in that space.²

The concept of a field is at the heart of the **particle in a field** analysis model. In the general version of this model, a particle resides in an area of space in which a field exists. Because of the existence of the field and a property of the particle, the particle experiences a force. In the gravitational version of the particle in a field model discussed here, the type of field is gravitational, and the property of the particle that results in the force is the particle’s mass m . The mathematical representation of the gravitational version of the particle in a field model is Equation 5.5:

$$\vec{\mathbf{F}}_g = m\vec{\mathbf{g}} \quad (5.5)$$

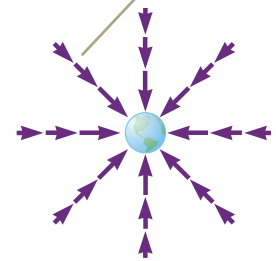
In future chapters, we will see two other versions of the particle in a field model. In the electric version, the property of a particle that results in a force is *electric charge*: when a charged particle is placed in an *electric field*, it experiences a force. The magnitude of the force is the product of the electric charge and the field, in analogy with the gravitational force in Equation 5.5. In the magnetic version of the particle in a field model, a charged particle is placed in a *magnetic field*. One other property of this particle is required for the particle to experience a force: the particle must have a *velocity* at some nonzero angle to the magnetic field. The electric and magnetic versions of the particle in a field model are critical to the understanding of the principles of *electromagnetism*, which we will study in Chapters 23–34.

Because the gravitational force acting on the object has a magnitude $GM_E m/r^2$ (see Eq. 13.4), the gravitational field $\vec{\mathbf{g}}$ at a distance r from the center of the Earth is

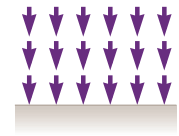
$$\vec{\mathbf{g}} = \frac{\vec{\mathbf{F}}_g}{m} = -\frac{GM_E}{r^2} \hat{\mathbf{r}} \quad (13.8)$$

where $\hat{\mathbf{r}}$ is a unit vector pointing radially outward from the Earth and the negative sign indicates that the field points toward the center of the Earth as illustrated in Figure 13.4a. The field vectors at different points surrounding the Earth vary in both direction and magnitude. In a small region near the Earth’s surface, the downward field $\vec{\mathbf{g}}$ is approximately constant and uniform as indicated in Figure 13.4b. Equation 13.8 is valid at all points *outside* the Earth’s surface, assuming the Earth is spherical. At the Earth’s surface, where $r = R_E$, $\vec{\mathbf{g}}$ has a magnitude of 9.80 N/kg. (The unit N/kg is the same as m/s^2 .)

The field vectors point in the direction of the acceleration a particle would experience if it were placed in the field. The magnitude of the field vector at any location is the magnitude of the free-fall acceleration at that location.



a



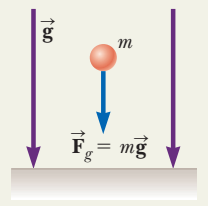
b

Figure 13.4 (a) The gravitational field vectors in the vicinity of a uniform spherical mass such as the Earth vary in both direction and magnitude. (b) The gravitational field vectors in a small region near the Earth’s surface are uniform in both direction and magnitude.

Analysis Model Particle in a Field (Gravitational)

Imagine an object with mass that we call a *source particle*. The source particle establishes a **gravitational field** $\vec{\mathbf{g}}$ throughout space. The gravitational field is evaluated by measuring the force on a test particle of mass m_0 and then using Equation 13.7. Now imagine a particle of mass m is placed in that field. The particle interacts with the gravitational field so that it experiences a gravitational force given by

$$\vec{\mathbf{F}}_g = m\vec{\mathbf{g}} \quad (5.5)$$



continued

²We shall return to this idea of mass affecting the space around it when we discuss Einstein’s theory of gravitation in Chapter 39.

Analysis Model Particle in a Field (Gravitational) (continued)
Examples:

- an object of mass m near the surface of the Earth has a *weight*, which is the result of the gravitational field established in space by the Earth
- a planet in the solar system is in orbit around the Sun, due to the gravitational force on the planet exerted by the gravitational field established by the Sun
- an object near a black hole is drawn into the black hole, never to escape, due to the tremendous gravitational field established by the black hole (Section 13.6)
- in the general theory of relativity, the gravitational field of a massive object is imagined to be described by a *curvature of space–time* (Chapter 39)
- the gravitational field of a massive object is imagined to be mediated by particles called *gravitons*, which have never been detected (Chapter 46)

Example 13.3 The Weight of the Space Station AM

The International Space Station operates at an altitude of 350 km. Plans for the final construction show that material of weight 4.22×10^6 N, measured at the Earth's surface, will have been lifted off the surface by various spacecraft during the construction process. What is the weight of the space station when in orbit?

SOLUTION

Conceptualize The mass of the space station is fixed; it is independent of its location. Based on the discussions in this section and Section 13.2, we realize that the value of g will be reduced at the height of the space station's orbit. Therefore, the weight of the Space Station will be smaller than that at the surface of the Earth.

Categorize We model the Space Station as a *particle in a gravitational field*.

Analyze From the particle in a field model, find the mass of the space station from its weight at the surface of the Earth:

$$m = \frac{F_g}{g} = \frac{4.22 \times 10^6 \text{ N}}{9.80 \text{ m/s}^2} = 4.31 \times 10^5 \text{ kg}$$

Use Equation 13.6 with $h = 350$ km to find the magnitude of the gravitational field at the orbital location:

$$g = \frac{GM_E}{(R_E + h)^2} = \frac{(6.674 \times 10^{-11} \text{ N} \cdot \text{m}^2/\text{kg}^2)(5.97 \times 10^{24} \text{ kg})}{(6.37 \times 10^6 \text{ m} + 0.350 \times 10^6 \text{ m})^2} = 8.82 \text{ m/s}^2$$

Use the particle in a field model again to find the space station's weight in orbit:

$$F_g = mg = (4.31 \times 10^5 \text{ kg})(8.82 \text{ m/s}^2) = \mathbf{3.80 \times 10^6 \text{ N}}$$

Finalize Notice that the weight of the Space Station is less when it is in orbit, as we expected. It has about 10% less weight than it has when on the Earth's surface, representing a 10% decrease in the magnitude of the gravitational field.

13.4 Kepler's Laws and the Motion of Planets

Humans have observed the movements of the planets, stars, and other celestial objects for thousands of years. In early history, these observations led scientists to regard the Earth as the center of the Universe. This *geocentric model* was elaborated and formalized by the Greek astronomer Claudius Ptolemy (c. 100–c. 170) in the second century and was accepted for the next 1400 years. In 1543, Polish astronomer Nicolaus Copernicus (1473–1543) suggested that the Earth and the other planets revolved in circular orbits around the Sun (the *heliocentric model*).

Danish astronomer Tycho Brahe (1546–1601) wanted to determine how the heavens were constructed and pursued a project to determine the positions of both

stars and planets. Those observations of the planets and 777 stars visible to the naked eye were carried out with only a large sextant and a compass. (The telescope had not yet been invented.)

German astronomer Johannes Kepler was Brahe's assistant for a short while before Brahe's death, whereupon he acquired his mentor's astronomical data and spent 16 years trying to deduce a mathematical model for the motion of the planets. Such data are difficult to sort out because the moving planets are observed from a moving Earth. After many laborious calculations, Kepler found that Brahe's data on the revolution of Mars around the Sun led to a successful model.

Kepler's complete analysis of planetary motion is summarized in three statements known as **Kepler's laws**:

1. All planets move in elliptical orbits with the Sun at one focus.
2. The radius vector drawn from the Sun to a planet sweeps out equal areas in equal time intervals.
3. The square of the orbital period of any planet is proportional to the cube of the semimajor axis of the elliptical orbit.

Kepler's First Law

The geocentric and original heliocentric models of the solar system both suggested circular orbits for heavenly bodies. Kepler's first law indicates that the circular orbit is a very special case and elliptical orbits are the general situation. This notion was difficult for scientists of the time to accept because they believed that perfect circular orbits of the planets reflected the perfection of heaven.

Figure 13.5 shows the geometry of an ellipse, which serves as our model for the elliptical orbit of a planet. An ellipse is mathematically defined by choosing two points F_1 and F_2 , each of which is called a **focus**, and then drawing a curve through points for which the sum of the distances r_1 and r_2 from F_1 and F_2 , respectively, is a constant. The longest distance through the center between points on the ellipse (and passing through each focus) is called the **major axis**, and this distance is $2a$. In Figure 13.5, the major axis is drawn along the x direction. The distance a is called the **semimajor axis**. Similarly, the shortest distance through the center between points on the ellipse is called the **minor axis** of length $2b$, where the distance b is the **semiminor axis**. Either focus of the ellipse is located at a distance c from the center of the ellipse, where $a^2 = b^2 + c^2$. In the elliptical orbit of a planet around the Sun, the Sun is at one focus of the ellipse. There is nothing at the other focus.

The **eccentricity** of an ellipse is defined as $e = c/a$, and it describes the general shape of the ellipse. For a circle, $c = 0$, and the eccentricity is therefore zero. The smaller b is compared with a , the shorter the ellipse is along the y direction compared with its extent in the x direction in Figure 13.5. As b decreases, c increases and the eccentricity e increases. Therefore, higher values of eccentricity correspond to longer and thinner ellipses. The range of values of the eccentricity for an ellipse is $0 < e < 1$.

Eccentricities for planetary orbits vary widely in the solar system. The eccentricity of the Earth's orbit is 0.017, which makes it nearly circular. On the other hand, the eccentricity of Mercury's orbit is 0.21, the highest of the eight planets. Figure 13.6a on page 396 shows an ellipse with an eccentricity equal to that of Mercury's orbit. Notice that even this highest-eccentricity orbit is difficult to distinguish from a circle, which is one reason Kepler's first law is an admirable accomplishment. The eccentricity of the orbit of Comet Halley is 0.97, describing an orbit whose major axis is much longer than its minor axis, as shown in Figure 13.6b. As a result, Comet Halley spends much of its 76-year period far from the Sun and invisible from the Earth. It is only visible to the naked eye during a small part of its orbit when it is near the Sun.

Now imagine a planet in an elliptical orbit such as that shown in Figure 13.5, with the Sun at focus F_2 . When the planet is at the far left in the diagram, the distance

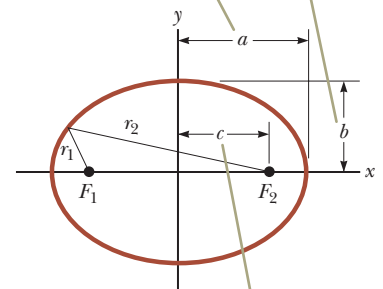
Kepler's laws



Johannes Kepler

German astronomer (1571–1630)
Kepler is best known for developing the laws of planetary motion based on the careful observations of Tycho Brahe.

The semimajor axis has length a , and the semiminor axis has length b .



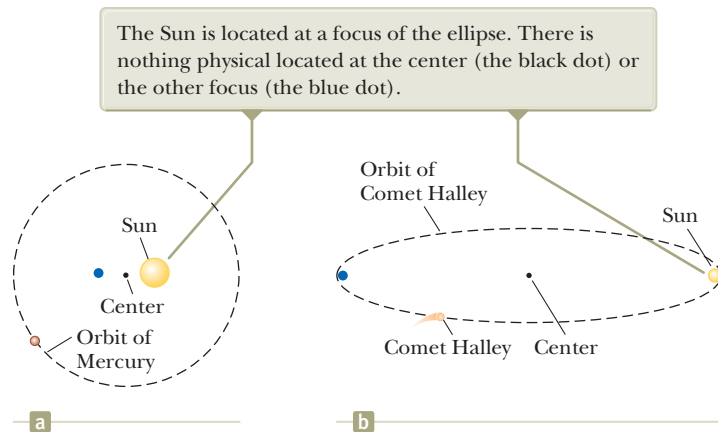
Each focus is located at a distance c from the center.

Figure 13.5 Plot of an ellipse.

Pitfall Prevention 13.2

Where Is the Sun? The Sun is located at one focus of the elliptical orbit of a planet. It is *not* located at the center of the ellipse.

Figure 13.6 (a) The shape of the orbit of Mercury, which has the highest eccentricity ($e = 0.21$) among the eight planets in the solar system. (b) The shape of the orbit of Comet Halley. The shape of the orbit is correct; the comet and the Sun are shown larger than in reality for clarity.



between the planet and the Sun is $a + c$. At this point, called the *aphelion*, the planet is at its maximum distance from the Sun. (For an object in orbit around the Earth, this point is called the *apogee*.) Conversely, when the planet is at the right end of the ellipse, the distance between the planet and the Sun is $a - c$. At this point, called the *perihelion* (for an Earth orbit, the *perigee*), the planet is at its minimum distance from the Sun.

Kepler's first law is a direct result of the inverse-square nature of the gravitational force. Circular and elliptical orbits correspond to objects that are *bound* to the gravitational force center. These objects include planets, asteroids, and comets that move repeatedly around the Sun as well as moons orbiting a planet. There are also *unbound* objects, such as a meteoroid from deep space that might pass by the Sun once and then never return. The gravitational force between the Sun and these objects also varies as the inverse square of the separation distance, and the allowed paths for these objects include parabolas ($e = 1$) and hyperbolas ($e > 1$).

Kepler's Second Law

Kepler's second law can be shown to be a result of the isolated system model for angular momentum. Consider a planet of mass M_p moving about the Sun in an elliptical orbit (Fig. 13.7a). Let's consider the planet as a system. We model the Sun to be so much more massive than the planet that the Sun does not move. The gravitational force exerted by the Sun on the planet is a central force, always along the radius vector, directed toward the Sun (Fig. 13.7a). **The torque on the planet due to this central force about an axis through the Sun is zero because \vec{F}_g is parallel to \vec{r} .**

Therefore, because the external torque on the planet is zero, it is modeled as an isolated system for angular momentum, and the angular momentum \vec{L} of the planet is a constant of the motion:

$$\Delta \vec{L} = 0 \rightarrow \vec{L} = \text{constant}$$

Evaluating \vec{L} for the planet,

$$\vec{L} = \vec{r} \times \vec{p} = M_p \vec{r} \times \vec{v} \rightarrow L = M_p |\vec{r} \times \vec{v}| \quad (13.9)$$

We can relate this result to the following geometric consideration. In a time interval dt , the radius vector \vec{r} in Figure 13.7b sweeps out the area dA , which equals half the area $|\vec{r} \times d\vec{r}|$ of the parallelogram formed by the vectors \vec{r} and $d\vec{r}$. Because the displacement of the planet in the time interval dt is given by $d\vec{r} = \vec{v} dt$,

$$dA = \frac{1}{2} |\vec{r} \times d\vec{r}| = \frac{1}{2} |\vec{r} \times \vec{v} dt| = \frac{1}{2} |\vec{r} \times \vec{v}| dt$$

Substitute for the absolute value of the cross product from Equation 13.9:

$$dA = \frac{1}{2} \left(\frac{L}{M_p} \right) dt$$

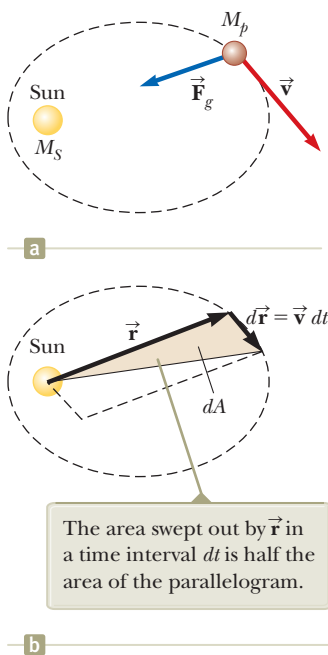


Figure 13.7 (a) The gravitational force acting on a planet is directed toward the Sun. (b) During a time interval dt , a parallelogram is formed by the vectors \vec{r} and $d\vec{r} = \vec{v} dt$.

Divide both sides by dt to obtain

$$\frac{dA}{dt} = \frac{L}{2M_p} \quad (13.10)$$

where L and M_p are both constants. This result shows that the derivative dA/dt is constant—the radius vector from the Sun to any planet sweeps out equal areas in equal time intervals as stated in Kepler's second law.

This conclusion is a result of the gravitational force being a central force, which in turn implies that angular momentum of the planet is constant. Therefore, the law applies to *any* situation that involves a central force, whether inverse square or not.

Kepler's Third Law

Kepler's third law can be predicted from the inverse-square law for circular orbits and our analysis models. Consider a planet of mass M_p that is assumed to be moving about the Sun (mass M_S) in a circular orbit as in Figure 13.8. Because the gravitational force provides the centripetal acceleration of the planet as it moves in a circle, we model the planet as a particle under a net force and as a particle in uniform circular motion and incorporate Newton's law of universal gravitation,

$$F_g = M_p a \quad \rightarrow \quad \frac{GM_S M_p}{r^2} = M_p \left(\frac{v^2}{r} \right)$$

The orbital speed of the planet is $2\pi r/T$, where T is the period; therefore, the preceding expression becomes

$$\frac{GM_S}{r^2} = \frac{(2\pi r/T)^2}{r}$$

$$T^2 = \left(\frac{4\pi^2}{GM_S} \right) r^3 = K_S r^3$$

where K_S is a constant given by

$$K_S = \frac{4\pi^2}{GM_S} = 2.97 \times 10^{-19} \text{ s}^2/\text{m}^3$$

This equation is also valid for elliptical orbits if we replace r with the length a of the semimajor axis (Fig. 13.5):

$$T^2 = \left(\frac{4\pi^2}{GM_S} \right) a^3 = K_S a^3 \quad (13.11)$$

Equation 13.11 is Kepler's third law: the square of the period is proportional to the cube of the semimajor axis. Because the semimajor axis of a circular orbit is its radius, this equation is valid for both circular and elliptical orbits. Notice that the constant of proportionality K_S is independent of the mass of the planet.³ Equation 13.11 is therefore valid for *any* planet. If we were to consider the orbit of a satellite such as the Moon about the Earth, the constant would have a different value, with the Sun's mass replaced by the Earth's mass; that is, $K_E = 4\pi^2/GM_E$.

Table 13.2 on page 398 is a collection of useful data for planets and other objects in the solar system. The far-right column verifies that the ratio T^2/r^3 is constant for all objects orbiting the Sun. The small variations in the values in this column are the result of uncertainties in the data measured for the periods and semimajor axes of the objects.

Recent astronomical work has revealed the existence of a large number of solar system objects beyond the orbit of Neptune. In general, these objects lie in the *Kuiper belt*, a region that extends from about 30 AU (the orbital radius of Neptune) to 50 AU. (An AU is an *astronomical unit*, equal to the radius of the Earth's orbit.) Current

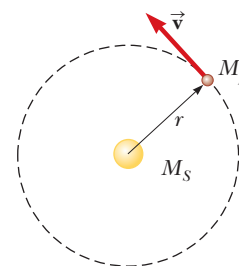


Figure 13.8 A planet of mass M_p moving in a circular orbit around the Sun. The orbits of all planets except Mercury are nearly circular.

◀ Kepler's third law

³Equation 13.11 is indeed a proportion because the ratio of the two quantities T^2 and a^3 is a constant. The variables in a proportion are not required to be limited to the first power only.

Table 13.2 Useful Planetary Data

Body	Mass (kg)	Mean Radius (m)	Period of Revolution (s)	Mean Distance from the Sun (m)	$\frac{T^2}{r^3}$ (s ² /m ³)
Mercury	3.30×10^{23}	2.44×10^6	7.60×10^6	5.79×10^{10}	2.98×10^{-19}
Venus	4.87×10^{24}	6.05×10^6	1.94×10^7	1.08×10^{11}	2.99×10^{-19}
Earth	5.97×10^{24}	6.37×10^6	3.156×10^7	1.496×10^{11}	2.97×10^{-19}
Mars	6.42×10^{23}	3.39×10^6	5.94×10^7	2.28×10^{11}	2.98×10^{-19}
Jupiter	1.90×10^{27}	6.99×10^7	3.74×10^8	7.78×10^{11}	2.97×10^{-19}
Saturn	5.68×10^{26}	5.82×10^7	9.29×10^8	1.43×10^{12}	2.95×10^{-19}
Uranus	8.68×10^{25}	2.54×10^7	2.65×10^9	2.87×10^{12}	2.97×10^{-19}
Neptune	1.02×10^{26}	2.46×10^7	5.18×10^9	4.50×10^{12}	2.94×10^{-19}
Pluto ^a	1.25×10^{22}	1.20×10^6	7.82×10^9	5.91×10^{12}	2.96×10^{-19}
Moon	7.35×10^{22}	1.74×10^6	—	—	—
Sun	1.989×10^{30}	6.96×10^8	—	—	—

^aIn August 2006, the International Astronomical Union adopted a definition of a planet that separates Pluto from the other eight planets. Pluto is now defined as a “dwarf planet” like the asteroid Ceres.

estimates identify at least 70 000 objects in this region with diameters larger than 100 km. The first Kuiper belt object (KBO) is Pluto, discovered in 1930 and formerly classified as a planet. Starting in 1992, many more have been detected. Several have diameters in the 1 000-km range, such as Varuna (discovered in 2000), Ixion (2001), Quaoar (2002), Sedna (2003), Haumea (2004), Orcus (2004), and Makemake (2005). One KBO, Eris, discovered in 2005, is believed to be significantly larger than Pluto. Other KBOs do not yet have names, but are currently indicated by their year of discovery and a code, such as 2009 YE7 and 2010 EK139.

A subset of about 1 400 KBOs are called “Plutinos” because, like Pluto, they exhibit a resonance phenomenon, orbiting the Sun two times in the same time interval as Neptune revolves three times. The contemporary application of Kepler’s laws and such exotic proposals as planetary angular momentum exchange and migrating planets suggest the excitement of this active area of current research.

Quick Quiz 13.3 An asteroid is in a highly eccentric elliptical orbit around the Sun. The period of the asteroid’s orbit is 90 days. Which of the following statements is true about the possibility of a collision between this asteroid and the Earth? **(a)** There is no possible danger of a collision. **(b)** There is a possibility of a collision. **(c)** There is not enough information to determine whether there is danger of a collision.

Example 13.4 The Mass of the Sun

Calculate the mass of the Sun, noting that the period of the Earth’s orbit around the Sun is 3.156×10^7 s and its distance from the Sun is 1.496×10^{11} m.

SOLUTION

Conceptualize Based on the mathematical representation of Kepler’s third law expressed in Equation 13.11, we realize that the mass of the central object in a gravitational system is related to the orbital size and period of objects in orbit around the central object.

Categorize This example is a relatively simple substitution problem.

Solve Equation 13.11 for the mass of the Sun:
$$M_S = \frac{4\pi^2 r^3}{GT^2}$$

Substitute the known values:
$$M_S = \frac{4\pi^2(1.496 \times 10^{11} \text{ m})^3}{(6.674 \times 10^{-11} \text{ N} \cdot \text{m}^2/\text{kg}^2)(3.156 \times 10^7 \text{ s})^2} = 1.99 \times 10^{30} \text{ kg}$$

13.4 continued

In Example 13.2, an understanding of gravitational forces enabled us to find out something about the density of the Earth's core, and now we have used this understanding to determine the mass of the Sun!

Example 13.5 A Geosynchronous Satellite AM

Consider a satellite of mass m moving in a circular orbit around the Earth at a constant speed v and at an altitude h above the Earth's surface as illustrated in Figure 13.9.

(A) Determine the speed of satellite in terms of G , h , R_E (the radius of the Earth), and M_E (the mass of the Earth).

SOLUTION

Conceptualize Imagine the satellite moving around the Earth in a circular orbit under the influence of the gravitational force. This motion is similar to that of the International Space Station, the Hubble Space Telescope, and other objects in orbit around the Earth.

Categorize The satellite moves in a circular orbit at a constant speed. Therefore, we categorize the satellite as a *particle in uniform circular motion* as well as a *particle under a net force*.

Analyze The only external force acting on the satellite is the gravitational force from the Earth, which acts toward the center of the Earth and keeps the satellite in its circular orbit.

Apply the particle under a net force and particle in uniform circular motion models to the satellite:

$$F_g = ma \rightarrow G \frac{M_E m}{r^2} = m \left(\frac{v^2}{r} \right)$$

Solve for v , noting that the distance r from the center of the Earth to the satellite is $r = R_E + h$:

$$(1) \quad v = \sqrt{\frac{GM_E}{r}} = \sqrt{\frac{GM_E}{R_E + h}}$$

(B) If the satellite is to be *geosynchronous* (that is, appearing to remain over a fixed position on the Earth), how fast is it moving through space?

SOLUTION

To appear to remain over a fixed position on the Earth, the period of the satellite must be $24 \text{ h} = 86\,400 \text{ s}$ and the satellite must be in orbit directly over the equator.

Solve Kepler's third law (Equation 13.11, with $a = r$ and $M_S \rightarrow M_E$) for r :

$$r = \left(\frac{GM_E T^2}{4\pi^2} \right)^{1/3}$$

Substitute numerical values:

$$r = \left[\frac{(6.674 \times 10^{-11} \text{ N} \cdot \text{m}^2/\text{kg}^2)(5.97 \times 10^{24} \text{ kg})(86\,400 \text{ s})^2}{4\pi^2} \right]^{1/3}$$

$$= 4.22 \times 10^7 \text{ m}$$

Use Equation (1) to find the speed of the satellite:

$$v = \sqrt{\frac{(6.674 \times 10^{-11} \text{ N} \cdot \text{m}^2/\text{kg}^2)(5.97 \times 10^{24} \text{ kg})}{4.22 \times 10^7 \text{ m}}}$$

$$= 3.07 \times 10^3 \text{ m/s}$$

Finalize The value of r calculated here translates to a height of the satellite above the surface of the Earth of almost 36 000 km. Therefore, geosynchronous satellites have the advantage of allowing an earthbound antenna to be aimed

continued

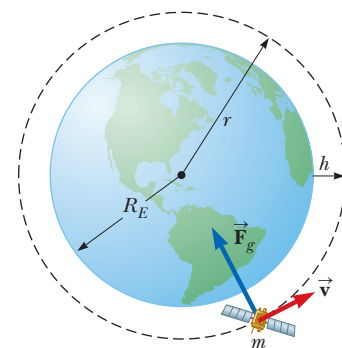


Figure 13.9 (Example 13.5) A satellite of mass m moving around the Earth in a circular orbit of radius r with constant speed v . The only force acting on the satellite is the gravitational force \vec{F}_g . (Not drawn to scale.)

13.5 continued

in a fixed direction, but there is a disadvantage in that the signals between the Earth and the satellite must travel a long distance. It is difficult to use geosynchronous satellites for optical observation of the Earth's surface because of their high altitude.

WHAT IF? What if the satellite motion in part (A) were taking place at height h above the surface of another planet more massive than the Earth but of the same radius? Would the satellite be moving at a higher speed or a lower speed than it does around the Earth?

Answer If the planet exerts a larger gravitational force on the satellite due to its larger mass, the satellite must move with a higher speed to avoid moving toward the surface. This conclusion is consistent with the predictions of Equation (1), which shows that because the speed v is proportional to the square root of the mass of the planet, the speed increases as the mass of the planet increases.

13.5 Gravitational Potential Energy

In Chapter 8, we introduced the concept of gravitational potential energy, which is the energy associated with the configuration of a system of objects interacting via the gravitational force. We emphasized that the gravitational potential energy function $U = mgy$ for a particle–Earth system is valid only when the particle of mass m is near the Earth's surface, where the gravitational force is independent of y . This expression for the gravitational potential energy is also restricted to situations where a very massive object (such as the Earth) establishes a gravitational field of magnitude g and a particle of much smaller mass m resides in that field. Because the gravitational force between two particles varies as $1/r^2$, we expect that a more general potential energy function—one that is valid without the restrictions mentioned above—will be different from $U = mgy$.

Recall from Equation 7.27 that the change in the potential energy of a system associated with a given displacement of a member of the system is defined as the negative of the internal work done by the force on that member during the displacement:

$$\Delta U = U_f - U_i = - \int_{r_i}^{r_f} F(r) dr \quad (13.12)$$

We can use this result to evaluate the general gravitational potential energy function. Consider a particle of mass m moving between two points **A** and **B** above the Earth's surface (Fig. 13.10). The particle is subject to the gravitational force given by Equation 13.1. We can express this force as

$$F(r) = - \frac{GM_E m}{r^2}$$

where the negative sign indicates that the force is attractive. Substituting this expression for $F(r)$ into Equation 13.12, we can compute the change in the gravitational potential energy function for the particle–Earth system as the separation distance r changes:

$$\begin{aligned} U_f - U_i &= GM_E m \int_{r_i}^{r_f} \frac{dr}{r^2} = GM_E m \left[-\frac{1}{r} \right]_{r_i}^{r_f} \\ U_f - U_i &= -GM_E m \left(\frac{1}{r_f} - \frac{1}{r_i} \right) \end{aligned} \quad (13.13)$$

As always, the choice of a reference configuration for the potential energy is completely arbitrary. It is customary to choose the reference configuration for zero

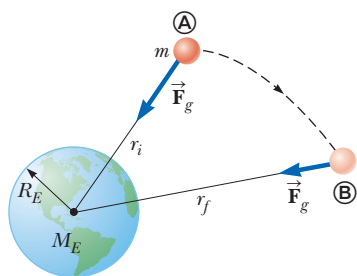


Figure 13.10 As a particle of mass m moves from **A** to **B** above the Earth's surface, the gravitational potential energy of the particle–Earth system changes according to Equation 13.12.

potential energy to be the same as that for which the force is zero. Taking $U_i = 0$ at $r_i = \infty$, we obtain the important result

$$U(r) = -\frac{GM_E m}{r} \quad (13.14)$$

This expression applies when the particle is separated from the center of the Earth by a distance r , provided that $r \geq R_E$. The result is not valid for particles inside the Earth, where $r < R_E$. Because of our choice of U_i , the function U is always negative (Fig. 13.11).

Although Equation 13.14 was derived for the particle–Earth system, a similar form of the equation can be applied to any two particles. That is, the gravitational potential energy associated with any pair of particles of masses m_1 and m_2 separated by a distance r is

$$U = -\frac{Gm_1 m_2}{r} \quad (13.15)$$

This expression shows that the gravitational potential energy for any pair of particles varies as $1/r$, whereas the force between them varies as $1/r^2$. Furthermore, the potential energy is negative because the force is attractive and we have chosen the potential energy as zero when the particle separation is infinite. Because the force between the particles is attractive, an external agent must do positive work to increase the separation between the particles. The work done by the external agent produces an increase in the potential energy as the two particles are separated. That is, U becomes less negative as r increases.

When two particles are at rest and separated by a distance r , an external agent has to supply an energy at least equal to $+Gm_1 m_2/r$ to separate the particles to an infinite distance. It is therefore convenient to think of the absolute value of the potential energy as the *binding energy* of the system. If the external agent supplies an energy greater than the binding energy, the excess energy of the system is in the form of kinetic energy of the particles when the particles are at an infinite separation.

We can extend this concept to three or more particles. In this case, the total potential energy of the system is the sum over all pairs of particles. Each pair contributes a term of the form given by Equation 13.15. For example, if the system contains three particles as in Figure 13.12,

$$U_{\text{total}} = U_{12} + U_{13} + U_{23} = -G\left(\frac{m_1 m_2}{r_{12}} + \frac{m_1 m_3}{r_{13}} + \frac{m_2 m_3}{r_{23}}\right)$$

The absolute value of U_{total} represents the work needed to separate the particles by an infinite distance.

Example 13.6 The Change in Potential Energy

A particle of mass m is displaced through a small vertical distance Δy near the Earth's surface. Show that in this situation the general expression for the change in gravitational potential energy given by Equation 13.13 reduces to the familiar relationship $\Delta U = mg\Delta y$.

SOLUTION

Conceptualize Compare the two different situations for which we have developed expressions for gravitational potential energy: (1) a planet and an object that are far apart for which the energy expression is Equation 13.14 and (2) a small object at the surface of a planet for which the energy expression is Equation 7.19. We wish to show that these two expressions are equivalent.

Gravitational potential energy of the Earth–particle system

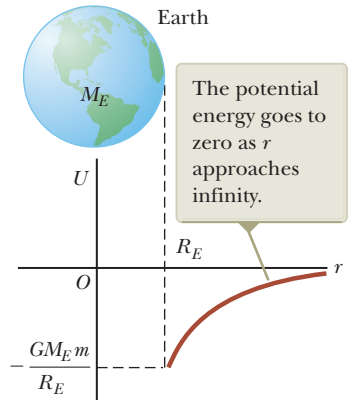


Figure 13.11 Graph of the gravitational potential energy U versus r for the system of an object above the Earth's surface.

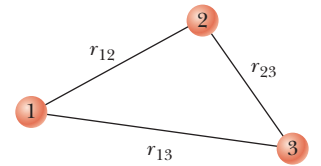


Figure 13.12 Three interacting particles.

continued

13.6 continued

Categorize This example is a substitution problem.

Combine the fractions in Equation 13.13:

$$(1) \quad \Delta U = -GM_E m \left(\frac{1}{r_f} - \frac{1}{r_i} \right) = GM_E m \left(\frac{r_f - r_i}{r_i r_f} \right)$$

Evaluate $r_f - r_i$ and $r_i r_f$ if both the initial and final positions of the particle are close to the Earth's surface:

$$r_f - r_i = \Delta y \quad r_i r_f \approx R_E^2$$

Substitute these expressions into Equation (1):

$$\Delta U \approx \frac{GM_E m}{R_E^2} \Delta y = mg \Delta y$$

where $g = GM_E/R_E^2$ (Eq. 13.5).

WHAT IF? Suppose you are performing upper-atmosphere studies and are asked by your supervisor to find the height in the Earth's atmosphere at which the "surface equation" $\Delta U = mg \Delta y$ gives a 1.0% error in the change in the potential energy. What is this height?

Answer Because the surface equation assumes a constant value for g , it will give a ΔU value that is larger than the value given by the general equation, Equation 13.13.

Set up a ratio reflecting a 1.0% error:

$$\frac{\Delta U_{\text{surface}}}{\Delta U_{\text{general}}} = 1.010$$

Substitute the expressions for each of these changes ΔU :

$$\frac{mg \Delta y}{GM_E m (\Delta y / r_i r_f)} = \frac{g r_i r_f}{GM_E} = 1.010$$

Substitute for r_i , r_f , and g from Equation 13.5:

$$\frac{(GM_E/R_E^2) R_E (R_E + \Delta y)}{GM_E} = \frac{R_E + \Delta y}{R_E} = 1 + \frac{\Delta y}{R_E} = 1.010$$

Solve for Δy :

$$\Delta y = 0.010 R_E = 0.010 (6.37 \times 10^6 \text{ m}) = 6.37 \times 10^4 \text{ m} = 63.7 \text{ km}$$

13.6 Energy Considerations in Planetary and Satellite Motion

Given the general expression for gravitational potential energy developed in Section 13.5, we can now apply our energy analysis models to gravitational systems. Consider an object of mass m moving with a speed v in the vicinity of a massive object of mass M , where $M \gg m$. The system might be a planet moving around the Sun, a satellite in orbit around the Earth, or a comet making a one-time flyby of the Sun. If we assume the object of mass M is at rest in an inertial reference frame, the total mechanical energy E of the two-object system when the objects are separated by a distance r is the sum of the kinetic energy of the object of mass m and the potential energy of the system, given by Equation 13.15:

$$E = K + U$$

$$E = \frac{1}{2} m v^2 - \frac{GMm}{r} \quad (13.16)$$

If the system of objects of mass m and M is isolated, and there are no nonconservative forces acting within the system, the mechanical energy of the system given by Equation 13.16 is the total energy of the system and this energy is conserved:

$$\Delta E_{\text{system}} = 0 \rightarrow \Delta K + \Delta U_g = 0 \rightarrow E_i = E_f$$

Therefore, as the object of mass m moves from \textcircled{A} to \textcircled{B} in Figure 13.10, the total energy remains constant and Equation 13.16 gives

$$\frac{1}{2} m v_i^2 - \frac{GMm}{r_i} = \frac{1}{2} m v_f^2 - \frac{GMm}{r_f} \quad (13.17)$$

Combining this statement of energy conservation with our earlier discussion of conservation of angular momentum, we see that both the total energy and the total angular momentum of a gravitationally bound, two-object system are constants of the motion.

Equation 13.16 shows that E may be positive, negative, or zero, depending on the value of v . For a bound system such as the Earth–Sun system, however, E is necessarily *less than zero* because we have chosen the convention that $U \rightarrow 0$ as $r \rightarrow \infty$.

We can easily establish that $E < 0$ for the system consisting of an object of mass m moving in a circular orbit about an object of mass $M \gg m$ (Fig. 13.13). Modeling the object of mass m as a particle under a net force and a particle in uniform circular motion gives

$$F_g = ma \quad \rightarrow \quad \frac{GMm}{r^2} = \frac{mv^2}{r}$$

Multiplying both sides by r and dividing by 2 gives

$$\frac{1}{2}mv^2 = \frac{GMm}{2r} \quad (13.18)$$

Substituting this equation into Equation 13.16, we obtain

$$E = \frac{GMm}{2r} - \frac{GMm}{r}$$

$$E = -\frac{GMm}{2r} \quad (\text{circular orbits}) \quad (13.19)$$

This result shows that the total mechanical energy is negative in the case of circular orbits. Notice that the kinetic energy is positive and equal to half the absolute value of the potential energy. The absolute value of E is also equal to the binding energy of the system because this amount of energy must be provided to the system to move the two objects infinitely far apart.

The total mechanical energy is also negative in the case of elliptical orbits. The expression for E for elliptical orbits is the same as Equation 13.19 with r replaced by the semimajor axis length a :

$$E = -\frac{GMm}{2a} \quad (\text{elliptical orbits}) \quad (13.20)$$

- Quick Quiz 13.4** A comet moves in an elliptical orbit around the Sun. Which point in its orbit (perihelion or aphelion) represents the highest value of (a) the speed of the comet, (b) the potential energy of the comet–Sun system, (c) the kinetic energy of the comet, and (d) the total energy of the comet–Sun system?

Example 13.7 Changing the Orbit of a Satellite

A space transportation vehicle releases a 470-kg communications satellite while in an orbit 280 km above the surface of the Earth. A rocket engine on the satellite boosts it into a geosynchronous orbit. How much energy does the engine have to provide?

SOLUTION

Conceptualize Notice that the height of 280 km is much lower than that for a geosynchronous satellite, 36 000 km, as mentioned in Example 13.5. Therefore, energy must be expended to raise the satellite to this much higher position.

Categorize This example is a substitution problem.

Find the initial radius of the satellite's orbit when it is still in the vehicle's cargo bay:

$$r_i = R_E + 280 \text{ km} = 6.65 \times 10^6 \text{ m}$$

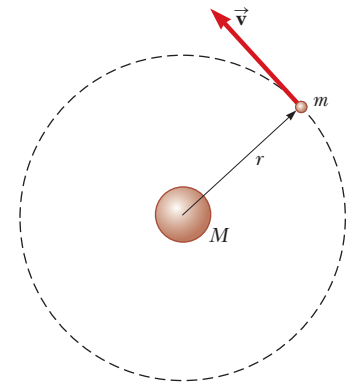


Figure 13.13 An object of mass m moving in a circular orbit about a much larger object of mass M .

◀ Total energy for circular orbits of an object of mass m around an object of mass $M \gg m$

◀ Total energy for elliptical orbits of an object of mass m around an object of mass $M \gg m$

continued

13.7 continued

Use Equation 13.19 to find the difference in energies for the satellite–Earth system with the satellite at the initial and final radii:

Substitute numerical values, using $r_f = 4.22 \times 10^7$ m from Example 13.5:

$$\Delta E = E_f - E_i = -\frac{GM_E m}{2r_f} - \left(-\frac{GM_E m}{2r_i}\right) = -\frac{GM_E m}{2} \left(\frac{1}{r_f} - \frac{1}{r_i}\right)$$

$$\Delta E = -\frac{(6.674 \times 10^{-11} \text{ N} \cdot \text{m}^2/\text{kg}^2)(5.97 \times 10^{24} \text{ kg})(470 \text{ kg})}{2} \times \left(\frac{1}{4.22 \times 10^7 \text{ m}} - \frac{1}{6.65 \times 10^6 \text{ m}}\right) = 1.19 \times 10^{10} \text{ J}$$

which is the energy equivalent of 89 gal of gasoline. NASA engineers must account for the changing mass of the spacecraft as it ejects burned fuel, something we have not done here. Would you expect the calculation that includes the effect of this changing mass to yield a greater or a lesser amount of energy required from the engine?

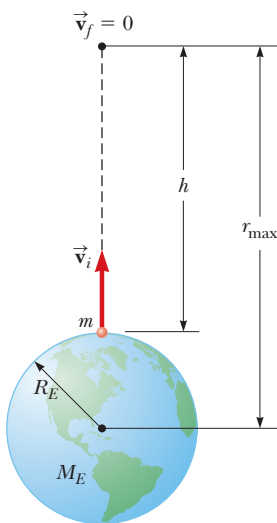


Figure 13.14 An object of mass m projected upward from the Earth's surface with an initial speed v_i reaches a maximum altitude h .

Escape Speed

Suppose an object of mass m is projected vertically upward from the Earth's surface with an initial speed v_i as illustrated in Figure 13.14. We can use energy considerations to find the value of the initial speed needed to allow the object to reach a certain distance away from the center of the Earth. Equation 13.16 gives the total energy of the system for any configuration. As the object is projected upward from the surface of the Earth, $v = v_i$ and $r = r_i = R_E$. When the object reaches its maximum altitude, $v = v_f = 0$ and $r = r_f = r_{\max}$. Because the object–Earth system is isolated, we substitute these values into the isolated-system model expression given by Equation 13.17:

$$\frac{1}{2}mv_i^2 - \frac{GM_E m}{R_E} = -\frac{GM_E m}{r_{\max}}$$

Solving for v_i^2 gives

$$v_i^2 = 2GM_E \left(\frac{1}{R_E} - \frac{1}{r_{\max}}\right) \quad (13.21)$$

For a given maximum altitude $h = r_{\max} - R_E$, we can use this equation to find the required initial speed.

We are now in a position to calculate the **escape speed**, which is the minimum speed the object must have at the Earth's surface to approach an infinite separation distance from the Earth. Traveling at this minimum speed, the object continues to move farther and farther away from the Earth as its speed asymptotically approaches zero. Letting $r_{\max} \rightarrow \infty$ in Equation 13.21 and identifying v_i as v_{esc} gives

$$v_{\text{esc}} = \sqrt{\frac{2GM_E}{R_E}} \quad (13.22)$$

This expression for v_{esc} is independent of the mass of the object. In other words, a spacecraft has the same escape speed as a molecule. Furthermore, the result is independent of the direction of the velocity and ignores air resistance.

If the object is given an initial speed equal to v_{esc} , the total energy of the system is equal to zero. Notice that when $r \rightarrow \infty$, the object's kinetic energy and the potential energy of the system are both zero. If v_i is greater than v_{esc} , however, the total energy of the system is greater than zero and the object has some residual kinetic energy as $r \rightarrow \infty$.

Escape speed from the Earth

Pitfall Prevention 13.3

You Can't Really Escape Although Equation 13.22 provides the "escape speed" from the Earth, *complete* escape from the Earth's gravitational influence is impossible because the gravitational force is of infinite range.

Example 13.8 Escape Speed of a Rocket

Calculate the escape speed from the Earth for a 5 000-kg spacecraft and determine the kinetic energy it must have at the Earth's surface to move infinitely far away from the Earth.

▶ 13.8 continued

SOLUTION

Conceptualize Imagine projecting the spacecraft from the Earth's surface so that it moves farther and farther away, traveling more and more slowly, with its speed approaching zero. Its speed will never reach zero, however, so the object will never turn around and come back.

Categorize This example is a substitution problem.

Use Equation 13.22 to find the escape speed:

$$v_{\text{esc}} = \sqrt{\frac{2GM_E}{R_E}} = \sqrt{\frac{2(6.674 \times 10^{-11} \text{ N} \cdot \text{m}^2/\text{kg}^2)(5.97 \times 10^{24} \text{ kg})}{6.37 \times 10^6 \text{ m}}}$$

$$= 1.12 \times 10^4 \text{ m/s}$$

Evaluate the kinetic energy of the spacecraft from Equation 7.16:

$$K = \frac{1}{2}mv_{\text{esc}}^2 = \frac{1}{2}(5.00 \times 10^3 \text{ kg})(1.12 \times 10^4 \text{ m/s})^2$$

$$= 3.13 \times 10^{11} \text{ J}$$

The calculated escape speed corresponds to about 25 000 mi/h. The kinetic energy of the spacecraft is equivalent to the energy released by the combustion of about 2 300 gal of gasoline.

WHAT IF? What if you want to launch a 1 000-kg spacecraft at the escape speed? How much energy would that require?

Answer In Equation 13.22, the mass of the object moving with the escape speed does not appear. Therefore, the escape speed for the 1 000-kg spacecraft is the same as that for the 5 000-kg spacecraft. The only change in the kinetic energy is due to the mass, so the 1 000-kg spacecraft requires one-fifth of the energy of the 5 000-kg spacecraft:

$$K = \frac{1}{5}(3.13 \times 10^{11} \text{ J}) = 6.25 \times 10^{10} \text{ J}$$

Equations 13.21 and 13.22 can be applied to objects projected from any planet. That is, in general, the escape speed from the surface of any planet of mass M and radius R is

$$v_{\text{esc}} = \sqrt{\frac{2GM}{R}} \quad (13.23)$$

Escape speeds for the planets, the Moon, and the Sun are provided in Table 13.3. The values vary from 2.3 km/s for the Moon to about 618 km/s for the Sun. These results, together with some ideas from the kinetic theory of gases (see Chapter 21), explain why some planets have atmospheres and others do not. As we shall see later, at a given temperature the average kinetic energy of a gas molecule depends only on the mass of the molecule. Lighter molecules, such as hydrogen and helium, have a higher average speed than heavier molecules at the same temperature. When the average speed of the lighter molecules is not much less than the escape speed of a planet, a significant fraction of them have a chance to escape.

This mechanism also explains why the Earth does not retain hydrogen molecules and helium atoms in its atmosphere but does retain heavier molecules, such as oxygen and nitrogen. On the other hand, the very large escape speed for Jupiter enables that planet to retain hydrogen, the primary constituent of its atmosphere.

Black Holes

In Example 11.7, we briefly described a rare event called a supernova, the catastrophic explosion of a very massive star. The material that remains in the central core of such an object continues to collapse, and the core's ultimate fate depends on its mass. If the core has a mass less than 1.4 times the mass of our Sun, it gradually cools down and ends its life as a white dwarf star. If the core's mass is greater than this value, however, it may collapse further due to gravitational forces. What

◀ **Escape speed from the surface of a planet of mass M and radius R**

Table 13.3 Escape Speeds from the Surfaces of the Planets, Moon, and Sun

Planet	v_{esc} (km/s)
Mercury	4.3
Venus	10.3
Earth	11.2
Mars	5.0
Jupiter	60
Saturn	36
Uranus	22
Neptune	24
Moon	2.3
Sun	618

remains is a neutron star, discussed in Example 11.7, in which the mass of a star is compressed to a radius of about 10 km. (On the Earth, a teaspoon of this material would weigh about 5 billion tons!)

An even more unusual star death may occur when the core has a mass greater than about three solar masses. The collapse may continue until the star becomes a very small object in space, commonly referred to as a **black hole**. In effect, black holes are remains of stars that have collapsed under their own gravitational force. If an object such as a spacecraft comes close to a black hole, the object experiences an extremely strong gravitational force and is trapped forever.

The escape speed for a black hole is very high because of the concentration of the star's mass into a sphere of very small radius (see Eq. 13.23). If the escape speed exceeds the speed of light c , radiation from the object (such as visible light) cannot escape and the object appears to be black (hence the origin of the terminology "black hole"). The critical radius R_s at which the escape speed is c is called the **Schwarzschild radius** (Fig. 13.15). The imaginary surface of a sphere of this radius surrounding the black hole is called the **event horizon**, which is the limit of how close you can approach the black hole and hope to escape.

There is evidence that supermassive black holes exist at the centers of galaxies, with masses very much larger than the Sun. (There is strong evidence of a supermassive black hole of mass 2–3 million solar masses at the center of our galaxy.)

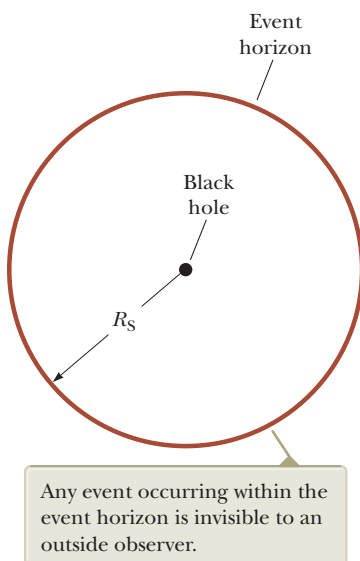


Figure 13.15 A black hole. The distance R_s equals the Schwarzschild radius.

Dark Matter

Equation (1) in Example 13.5 shows that the speed of an object in orbit around the Earth decreases as the object is moved farther away from the Earth:

$$v = \sqrt{\frac{GM_E}{r}} \quad (13.24)$$

Using data in Table 13.2 to find the speeds of planets in their orbits around the Sun, we find the same behavior for the planets. Figure 13.16 shows this behavior for the eight planets of our solar system. The theoretical prediction of the planet speed as a function of distance from the Sun is shown by the red-brown curve, using Equation 13.24 with the mass of the Earth replaced by the mass of the Sun. Data for the individual planets lie right on this curve. This behavior results from the vast majority of the mass of the solar system being concentrated in a small space, i.e., the Sun.

Extending this concept further, we might expect the same behavior in a galaxy. Much of the visible galactic mass, including that of a supermassive black hole, is near the central core of a galaxy. The opening photograph for this chapter shows the central core of the Whirlpool galaxy as a very bright area surrounded by the "arms" of the galaxy, which contain material in orbit around the central core. Based on this distribution of matter in the galaxy, the speed of an object in the outer part of the galaxy would be smaller than that for objects closer to the center, just like for the planets of the solar system.

That is *not* what is observed, however. Figure 13.17 shows the results of measurements of the speeds of objects in the Andromeda galaxy as a function of distance from the galaxy's center.⁴ The red-brown curve shows the expected speeds for these objects if they were traveling in circular orbits around the mass concentrated in the central core. The data for the individual objects in the galaxy shown by the black dots are all well above the theoretical curve. These data, as well as an extensive amount of data taken over the past half century, show that for objects outside the central core of the galaxy, the curve of speed versus distance from the center of the galaxy is approximately flat rather than decreasing at larger distances. Therefore, these objects (including our own Solar System in the Milky Way) are rotating faster than can be accounted for by gravity due to the visible galaxy! This surprising

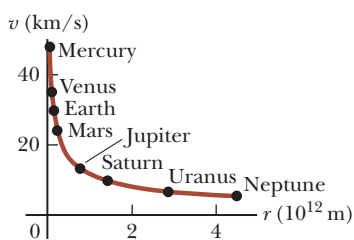


Figure 13.16 The orbital speed v as a function of distance r from the Sun for the eight planets of the solar system. The theoretical curve is in red-brown, and the data points for the planets are in black.

⁴V. C. Rubin and W. K. Ford, "Rotation of the Andromeda Nebula from a Spectroscopic Survey of Emission Regions," *Astrophysical Journal* **159**: 379–403 (1970).

result means that there must be additional mass in a more extended distribution, causing these objects to orbit so fast, and has led scientists to propose the existence of **dark matter**. This matter is proposed to exist in a large halo around each galaxy (with a radius up to 10 times as large as the visible galaxy's radius). Because it is not luminous (i.e., does not emit electromagnetic radiation) it must be either very cold or electrically neutral. Therefore, we cannot "see" dark matter, except through its gravitational effects.

The proposed existence of dark matter is also implied by earlier observations made on larger gravitationally bound structures known as galaxy clusters.⁵ These observations show that the orbital speeds of galaxies in a cluster are, on average, too large to be explained by the luminous matter in the cluster alone. The speeds of the individual galaxies are so high, they suggest that there is 50 times as much dark matter in galaxy clusters as in the galaxies themselves!

Why doesn't dark matter affect the orbital speeds of planets like it does those of a galaxy? It seems that a solar system is too small a structure to contain enough dark matter to affect the behavior of orbital speeds. A galaxy or galaxy cluster, on the other hand, contains huge amounts of dark matter, resulting in the surprising behavior.

What, though, *is* dark matter? At this time, no one knows. One theory claims that dark matter is based on a particle called a weakly interacting massive particle, or WIMP. If this theory is correct, calculations show that about 200 WIMPs pass through a human body at any given time. The new Large Hadron Collider in Europe (see Chapter 46) is the first particle accelerator with enough energy to possibly generate and detect the existence of WIMPs, which has generated much current interest in dark matter. Keeping an eye on this research in the future should be exciting.

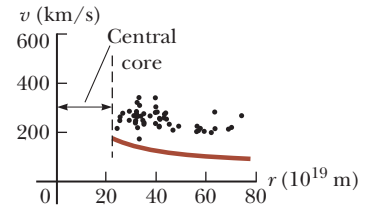


Figure 13.17 The orbital speed v of a galaxy object as a function of distance r from the center of the central core of the Andromeda galaxy. The theoretical curve is in red-brown, and the data points for the galaxy objects are in black. No data are provided on the left because the behavior inside the central core of the galaxy is more complicated.

Summary

Definitions

The **gravitational field** at a point in space is defined as the gravitational force $\vec{\mathbf{F}}_g$ experienced by any test particle located at that point divided by the mass m_0 of the test particle:

$$\vec{\mathbf{g}} \equiv \frac{\vec{\mathbf{F}}_g}{m_0} \quad (13.7)$$

Concepts and Principles

Newton's law of universal gravitation states that the gravitational force of attraction between any two particles of masses m_1 and m_2 separated by a distance r has the magnitude

$$F_g = G \frac{m_1 m_2}{r^2} \quad (13.1)$$

where $G = 6.674 \times 10^{-11} \text{ N} \cdot \text{m}^2/\text{kg}^2$ is the **universal gravitational constant**. This equation enables us to calculate the force of attraction between masses under many circumstances.

An object at a distance h above the Earth's surface experiences a gravitational force of magnitude mg , where g is the free-fall acceleration at that elevation:

$$g = \frac{GM_E}{r^2} = \frac{GM_E}{(R_E + h)^2} \quad (13.6)$$

In this expression, M_E is the mass of the Earth and R_E is its radius. Therefore, the weight of an object decreases as the object moves away from the Earth's surface.

⁵F. Zwicky, "On the Masses of Nebulae and of Clusters of Nebulae," *Astrophysical Journal* **86**: 217–246 (1937).

Kepler's laws of planetary motion state:

1. All planets move in elliptical orbits with the Sun at one focus.
2. The radius vector drawn from the Sun to a planet sweeps out equal areas in equal time intervals.
3. The square of the orbital period of any planet is proportional to the cube of the semimajor axis of the elliptical orbit.

Kepler's third law can be expressed as

$$T^2 = \left(\frac{4\pi^2}{GM_S} \right) a^3 \quad (13.11)$$

where M_S is the mass of the Sun and a is the semimajor axis. For a circular orbit, a can be replaced in Equation 13.11 by the radius r . Most planets have nearly circular orbits around the Sun.

The **gravitational potential energy** associated with a system of two particles of mass m_1 and m_2 separated by a distance r is

$$U = -\frac{Gm_1m_2}{r} \quad (13.15)$$

where U is taken to be zero as $r \rightarrow \infty$.

If an isolated system consists of an object of mass m moving with a speed v in the vicinity of a massive object of mass M , the total energy E of the system is the sum of the kinetic and potential energies:

$$E = \frac{1}{2}mv^2 - \frac{GMm}{r} \quad (13.16)$$

The total energy of the system is a constant of the motion. If the object moves in an elliptical orbit of semimajor axis a around the massive object and $M \gg m$, the total energy of the system is

$$E = -\frac{GMm}{2a} \quad (13.20)$$

For a circular orbit, this same equation applies with $a = r$.

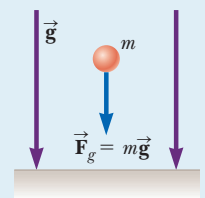
The **escape speed** for an object projected from the surface of a planet of mass M and radius R is

$$v_{\text{esc}} = \sqrt{\frac{2GM}{R}} \quad (13.23)$$

Analysis Model for Problem Solving

Particle in a Field (Gravitational) A source particle with some mass establishes a **gravitational field** \vec{g} throughout space. When a particle of mass m is placed in that field, it experiences a gravitational force given by

$$\vec{F}_g = m\vec{g} \quad (5.5)$$



Objective Questions

I. denotes answer available in *Student Solutions Manual/Study Guide*

1. A system consists of five particles. How many terms appear in the expression for the total gravitational potential energy of the system? (a) 4 (b) 5 (c) 10 (d) 20 (e) 25
2. Rank the following quantities of energy from largest to smallest. State if any are equal. (a) the absolute value of the average potential energy of the Sun–Earth system (b) the average kinetic energy of the Earth in its orbital motion relative to the Sun (c) the absolute value of the total energy of the Sun–Earth system
3. A satellite moves in a circular orbit at a constant speed around the Earth. Which of the following statements is

true? (a) No force acts on the satellite. (b) The satellite moves at constant speed and hence doesn't accelerate. (c) The satellite has an acceleration directed away from the Earth. (d) The satellite has an acceleration directed toward the Earth. (e) Work is done on the satellite by the gravitational force.

4. Suppose the gravitational acceleration at the surface of a certain moon A of Jupiter is 2 m/s^2 . Moon B has twice the mass and twice the radius of moon A. What is the gravitational acceleration at its surface? Neglect the gravitational acceleration due to Jupiter. (a) 8 m/s^2 (b) 4 m/s^2 (c) 2 m/s^2 (d) 1 m/s^2 (e) 0.5 m/s^2

5. Imagine that nitrogen and other atmospheric gases were more soluble in water so that the atmosphere of the Earth is entirely absorbed by the oceans. Atmospheric pressure would then be zero, and outer space would start at the planet's surface. Would the Earth then have a gravitational field? (a) Yes, and at the surface it would be larger in magnitude than 9.8 N/kg . (b) Yes, and it would be essentially the same as the current value. (c) Yes, and it would be somewhat less than 9.8 N/kg . (d) Yes, and it would be much less than 9.8 N/kg . (e) No, it would not.
6. An object of mass m is located on the surface of a spherical planet of mass M and radius R . The escape speed from the planet does not depend on which of the following? (a) M (b) m (c) the density of the planet (d) R (e) the acceleration due to gravity on that planet
7. A satellite originally moves in a circular orbit of radius R around the Earth. Suppose it is moved into a circular orbit of radius $4R$. (i) What does the force exerted on the satellite then become? (a) eight times larger (b) four times larger (c) one-half as large (d) one-eighth as large (e) one-sixteenth as large (ii) What happens to the satellite's speed? Choose from the same possibilities (a) through (e). (iii) What happens to its period? Choose from the same possibilities (a) through (e).
8. The vernal equinox and the autumnal equinox are associated with two points 180° apart in the Earth's orbit. That is, the Earth is on precisely opposite sides of the Sun when it passes through these two points. From the vernal equinox, 185.4 days elapse before the autumnal equinox. Only 179.8 days elapse from the autumnal equinox until the next vernal equinox. Why is the interval from the March (vernal) to the September (autumnal) equinox (which contains the summer solstice) longer than the interval from the September to the March equinox rather than being equal to that interval? Choose one of the following reasons. (a) They are really the same, but the Earth spins faster during the "summer" interval, so the days are shorter. (b) Over the "summer" interval, the Earth moves slower because it is farther from the Sun. (c) Over the March-to-September interval, the Earth moves slower because it is closer to the Sun. (d) The Earth has less kinetic energy when it is warmer. (e) The Earth has less orbital angular momentum when it is warmer.
9. Rank the magnitudes of the following gravitational forces from largest to smallest. If two forces are equal, show their equality in your list. (a) the force exerted by a 2-kg object on a 3-kg object 1 m away (b) the force exerted by a 2-kg object on a 9-kg object 1 m away (c) the force exerted by a 2-kg object on a 9-kg object 2 m away (d) the force exerted by a 9-kg object on a 2-kg object 2 m away (e) the force exerted by a 4-kg object on another 4-kg object 2 m away
10. The gravitational force exerted on an astronaut on the Earth's surface is 650 N directed downward. When she is in the space station in orbit around the Earth, is the gravitational force on her (a) larger, (b) exactly the same, (c) smaller, (d) nearly but not exactly zero, or (e) exactly zero?
11. Halley's comet has a period of approximately 76 years, and it moves in an elliptical orbit in which its distance from the Sun at closest approach is a small fraction of its maximum distance. Estimate the comet's maximum distance from the Sun in astronomical units (AUs) (the distance from the Earth to the Sun). (a) 6 AU (b) 12 AU (c) 20 AU (d) 28 AU (e) 35 AU

Conceptual Questions

1. denotes answer available in *Student Solutions Manual/Study Guide*

1. Each *Voyager* spacecraft was accelerated toward escape speed from the Sun by the gravitational force exerted by Jupiter on the spacecraft. (a) Is the gravitational force a conservative or a nonconservative force? (b) Does the interaction of the spacecraft with Jupiter meet the definition of an elastic collision? (c) How could the spacecraft be moving faster after the collision?
2. In his 1798 experiment, Cavendish was said to have "weighed the Earth." Explain this statement.
3. Why don't we put a geosynchronous weather satellite in orbit around the 45th parallel? Wouldn't such a satellite be more useful in the United States than one in orbit around the equator?
4. (a) Explain why the force exerted on a particle by a uniform sphere must be directed toward the center of the sphere. (b) Would this statement be true if the mass distribution of the sphere were not spherically symmetric? Explain.
5. (a) At what position in its elliptical orbit is the speed of a planet a maximum? (b) At what position is the speed a minimum?
6. You are given the mass and radius of planet X. How would you calculate the free-fall acceleration on this planet's surface?
7. (a) If a hole could be dug to the center of the Earth, would the force on an object of mass m still obey Equation 13.1 there? (b) What do you think the force on m would be at the center of the Earth?
8. Explain why it takes more fuel for a spacecraft to travel from the Earth to the Moon than for the return trip. Estimate the difference.
9. A satellite in low-Earth orbit is not truly traveling through a vacuum. Rather, it moves through very thin air. Does the resulting air friction cause the satellite to slow down?

Problems

WebAssign

The problems found in this chapter may be assigned online in Enhanced WebAssign

1. straightforward; 2. intermediate; 3. challenging

1. full solution available in the *Student Solutions Manual/Study Guide*

AMT Analysis Model tutorial available in Enhanced WebAssign

GP Guided Problem

M Master It tutorial available in Enhanced WebAssign

W Watch It video solution available in Enhanced WebAssign

Section 13.1 Newton's Law of Universal Gravitation

Problem 12 in Chapter 1 can also be assigned with this section.

1. In introductory physics laboratories, a typical Cavendish balance for measuring the gravitational constant G uses lead spheres with masses of 1.50 kg and 15.0 g whose centers are separated by about 4.50 cm. Calculate the gravitational force between these spheres, treating each as a particle located at the sphere's center.

2. Determine the order of magnitude of the gravitational force that you exert on another person 2 m away. In your solution, state the quantities you measure or estimate and their values.

3. A 200-kg object and a 500-kg object are separated by 4.00 m. (a) Find the net gravitational force exerted by these objects on a 50.0-kg object placed midway between them. (b) At what position (other than an infinitely remote one) can the 50.0-kg object be placed so as to experience a net force of zero from the other two objects?

4. During a solar eclipse, the Moon, the Earth, and the Sun all lie on the same line, with the Moon between the Earth and the Sun. (a) What force is exerted by the Sun on the Moon? (b) What force is exerted by the Earth on the Moon? (c) What force is exerted by the Sun on the Earth? (d) Compare the answers to parts (a) and (b). Why doesn't the Sun capture the Moon away from the Earth?

5. Two ocean liners, each with a mass of 40 000 metric tons, are moving on parallel courses 100 m apart. What is the magnitude of the acceleration of one of the liners toward the other due to their mutual gravitational attraction? Model the ships as particles.

6. Three uniform spheres of masses $m_1 = 2.00$ kg, $m_2 = 4.00$ kg, and $m_3 = 6.00$ kg are placed at the corners of a right triangle as shown in Figure P13.6. Calculate the resultant gravitational force on the object of mass m_2 , assuming the spheres are isolated from the rest of the Universe.

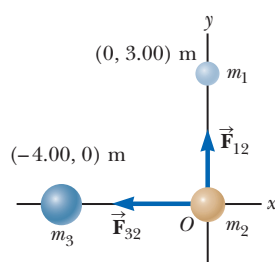


Figure P13.6

7. Two identical isolated particles, each of mass 2.00 kg, are separated by a distance of 30.0 cm. What is the

magnitude of the gravitational force exerted by one particle on the other?

8. *Why is the following situation impossible?* The centers of two homogeneous spheres are 1.00 m apart. The spheres are each made of the same element from the periodic table. The gravitational force between the spheres is 1.00 N.

9. Two objects attract each other with a gravitational force of magnitude 1.00×10^{-8} N when separated by 20.0 cm. If the total mass of the two objects is 5.00 kg, what is the mass of each?

10. **Review.** A student proposes to study the gravitational force by suspending two 100.0-kg spherical objects at the lower ends of cables from the ceiling of a tall cathedral and measuring the deflection of the cables from the vertical. The 45.00-m-long cables are attached to the ceiling 1.000 m apart. The first object is suspended, and its position is carefully measured. The second object is suspended, and the two objects attract each other gravitationally. By what distance has the first object moved horizontally from its initial position due to the gravitational attraction to the other object? *Suggestion:* Keep in mind that this distance will be very small and make appropriate approximations.

Section 13.2 Free-Fall Acceleration and the Gravitational Force

11. When a falling meteoroid is at a distance above the Earth's surface of 3.00 times the Earth's radius, what is its acceleration due to the Earth's gravitation?

12. The free-fall acceleration on the surface of the Moon is about one-sixth that on the surface of the Earth. The radius of the Moon is about $0.250R_E$ ($R_E =$ Earth's radius $= 6.37 \times 10^6$ m). Find the ratio of their average densities, $\rho_{\text{Moon}}/\rho_{\text{Earth}}$.

13. **Review.** Miranda, a satellite of Uranus, is shown in Figure P13.13a. It can be modeled as a sphere of radius 242 km and mass 6.68×10^{19} kg. (a) Find the free-fall acceleration on its surface. (b) A cliff on Miranda is 5.00 km high. It appears on the limb at the 11 o'clock position in Figure P13.13a and is magnified in Figure P13.13b. If a devotee of extreme sports runs horizontally off the top of the cliff at 8.50 m/s, for what time interval is he in flight? (c) How far from the base of the vertical cliff does he strike the icy surface of Miranda? (d) What will be his vector impact velocity?

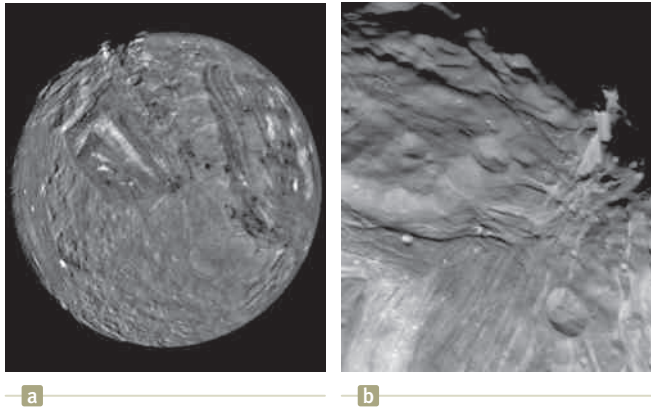


Figure P13.13

Section 13.3 Analysis Model: Particle in a Field (Gravitational)

14. (a) Compute the vector gravitational field at a point P on the perpendicular bisector of the line joining two objects of equal mass separated by a distance $2a$ as shown in Figure P13.14. (b) Explain physically why the field should approach zero as $r \rightarrow 0$. (c) Prove mathematically that the answer to part (a) behaves in this way. (d) Explain physically why the magnitude of the field should approach $2GM/r^2$ as $r \rightarrow \infty$. (e) Prove mathematically that the answer to part (a) behaves correctly in this limit.

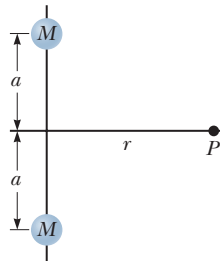


Figure P13.14

15. Three objects of equal mass are located at three corners of a square of edge length ℓ as shown in Figure P13.15. Find the magnitude and direction of the gravitational field at the fourth corner due to these objects.

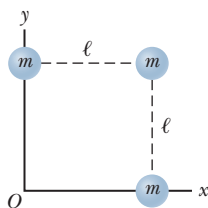


Figure P13.15

16. A spacecraft in the shape of a long cylinder has a length **AMT** of 100 m, and its mass with occupants is 1 000 kg. **W** It has strayed too close to a black hole having a mass 100 times that of the Sun (Fig. P13.16). The nose of the spacecraft points toward the black hole, and the distance between the nose and the center of the black hole is 10.0 km. (a) Determine the total force on the spacecraft. (b) What is the difference in the gravita-

tional fields acting on the occupants in the nose of the ship and on those in the rear of the ship, farthest from the black hole? (This difference in accelerations grows rapidly as the ship approaches the black hole. It puts the body of the ship under extreme tension and eventually tears it apart.)

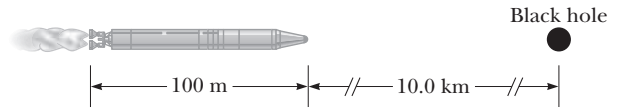


Figure P13.16

Section 13.4 Kepler's Laws and the Motion of Planets

17. An artificial satellite circles the Earth in a circular orbit at a location where the acceleration due to gravity is 9.00 m/s^2 . Determine the orbital period of the satellite.
18. Io, a satellite of Jupiter, has an orbital period of 1.77 days and an orbital radius of $4.22 \times 10^5 \text{ km}$. From these data, determine the mass of Jupiter.
19. A minimum-energy transfer orbit to an outer planet consists of putting a spacecraft on an elliptical trajectory with the departure planet corresponding to the perihelion of the ellipse, or the closest point to the Sun, and the arrival planet at the aphelion, or the farthest point from the Sun. (a) Use Kepler's third law to calculate how long it would take to go from Earth to Mars on such an orbit as shown in Figure P13.19. (b) Can such an orbit be undertaken at any time? Explain.

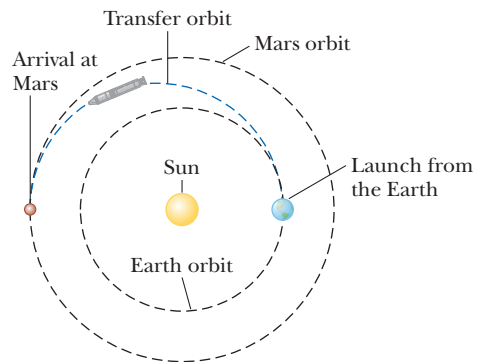


Figure P13.19

20. A particle of mass m moves along a straight line with constant velocity \vec{v}_0 in the x direction, a distance b from the x axis (Fig. P13.20). (a) Does the particle possess any angular momentum about the origin? (b) Explain why the amount of its angular momentum should change or should stay constant. (c) Show that Kepler's second law is satisfied by showing that the two shaded triangles in the figure have the same area when $t_{\text{B}} - t_{\text{C}} = t_{\text{D}} - t_{\text{A}}$.

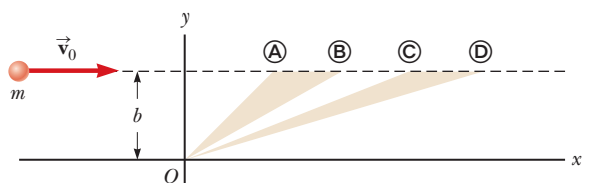


Figure P13.20

- 21.** Plaskett's binary system consists of two stars that revolve in a circular orbit about a center of mass midway between them. This statement implies that the masses of the two stars are equal (Fig. P13.21). Assume the orbital speed of each star is $|\vec{v}| = 220$ km/s and the orbital period of each is 14.4 days. Find the mass M of each star. (For comparison, the mass of our Sun is 1.99×10^{30} kg.)

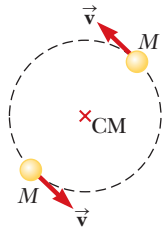


Figure P13.21

- 22.** Two planets X and Y travel counterclockwise in circular orbits about a star as shown in Figure P13.22. The radii of their orbits are in the ratio 3:1. At one moment, they are aligned as shown in Figure P13.22a, making a straight line with the star. During the next five years, the angular displacement of planet X is 90.0° as shown in Figure P13.22b. What is the angular displacement of planet Y at this moment?

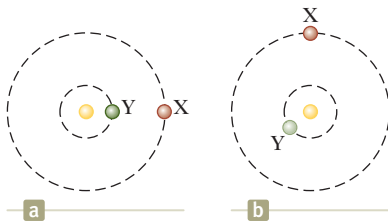


Figure P13.22

- 23.** Comet Halley (Fig. P13.23) approaches the Sun to within 0.570 AU, and its orbital period is 75.6 yr. (AU is the symbol for astronomical unit, where $1 \text{ AU} = 1.50 \times 10^{11}$ m is the mean Earth–Sun distance.) How far from the Sun will Halley's comet travel before it starts its return journey?

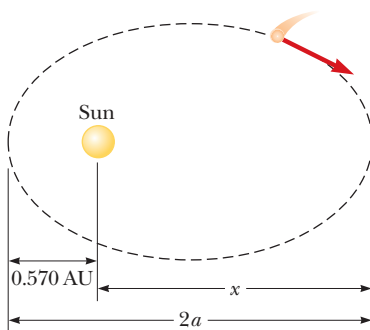


Figure P13.23 (Orbit is not drawn to scale.)

- 24.** The *Explorer VIII* satellite, placed into orbit November 3, 1960, to investigate the ionosphere, had the following

orbit parameters: perigee, 459 km; apogee, 2 289 km (both distances above the Earth's surface); period, 112.7 min. Find the ratio v_p/v_a of the speed at perigee to that at apogee.

- 25.** Use Kepler's third law to determine how many days it takes a spacecraft to travel in an elliptical orbit from a point 6 670 km from the Earth's center to the Moon, 385 000 km from the Earth's center.
- 26.** Neutron stars are extremely dense objects formed from the remnants of supernova explosions. Many rotate very rapidly. Suppose the mass of a certain spherical neutron star is twice the mass of the Sun and its radius is 10.0 km. Determine the greatest possible angular speed it can have so that the matter at the surface of the star on its equator is just held in orbit by the gravitational force.
- 27.** A synchronous satellite, which always remains above the same point on a planet's equator, is put in orbit around Jupiter to study that planet's famous red spot. Jupiter rotates once every 9.84 h. Use the data of Table 13.2 to find the altitude of the satellite above the surface of the planet.
- 28.** (a) Given that the period of the Moon's orbit about the Earth is 27.32 days and the nearly constant distance between the center of the Earth and the center of the Moon is 3.84×10^8 m, use Equation 13.11 to calculate the mass of the Earth. (b) Why is the value you calculate a bit too large?
- 29.** Suppose the Sun's gravity were switched off. The planets would leave their orbits and fly away in straight lines as described by Newton's first law. (a) Would Mercury ever be farther from the Sun than Pluto? (b) If so, find how long it would take Mercury to achieve this passage. If not, give a convincing argument that Pluto is always farther from the Sun than is Mercury.

Section 13.5 Gravitational Potential Energy

Note: In Problems 30 through 50, assume $U = 0$ at $r = \infty$.

- 30.** A satellite in Earth orbit has a mass of 100 kg and is at an altitude of 2.00×10^6 m. (a) What is the potential energy of the satellite–Earth system? (b) What is the magnitude of the gravitational force exerted by the Earth on the satellite? (c) **What If?** What force, if any, does the satellite exert on the Earth?
- 31.** How much work is done by the Moon's gravitational field on a 1 000-kg meteor as it comes in from outer space and impacts on the Moon's surface?
- 32.** How much energy is required to move a 1 000-kg object from the Earth's surface to an altitude twice the Earth's radius?
- 33.** After the Sun exhausts its nuclear fuel, its ultimate fate will be to collapse to a *white dwarf* state. In this state, it would have approximately the same mass as it has now, but its radius would be equal to the radius of the Earth. Calculate (a) the average density of the white dwarf, (b) the surface free-fall acceleration, and (c) the

gravitational potential energy associated with a 1.00-kg object at the surface of the white dwarf.

34. An object is released from rest at an altitude h above the surface of the Earth. (a) Show that its speed at a distance r from the Earth's center, where $R_E \leq r \leq R_E + h$, is

$$v = \sqrt{2GM_E \left(\frac{1}{r} - \frac{1}{R_E + h} \right)}$$

(b) Assume the release altitude is 500 km. Perform the integral

$$\Delta t = \int_i^f dt = - \int_i^f \frac{dr}{v}$$

to find the time of fall as the object moves from the release point to the Earth's surface. The negative sign appears because the object is moving opposite to the radial direction, so its speed is $v = -dr/dt$. Perform the integral numerically.

35. A system consists of three particles, each of mass 5.00 g, located at the corners of an equilateral triangle with sides of 30.0 cm. (a) Calculate the potential energy of the system. (b) Assume the particles are released simultaneously. Describe the subsequent motion of each. Will any collisions take place? Explain.

Section 13.6 Energy Considerations in Planetary and Satellite Motion

36. **AMT** A space probe is fired as a projectile from the Earth's surface with an initial speed of 2.00×10^4 m/s. What will its speed be when it is very far from the Earth? Ignore atmospheric friction and the rotation of the Earth.

37. A 500-kg satellite is in a circular orbit at an altitude of 500 km above the Earth's surface. Because of air friction, the satellite eventually falls to the Earth's surface, where it hits the ground with a speed of 2.00 km/s. How much energy was transformed into internal energy by means of air friction?

38. **W** A "treetop satellite" moves in a circular orbit just above the surface of a planet, assumed to offer no air resistance. Show that its orbital speed v and the escape speed from the planet are related by the expression $v_{\text{esc}} = \sqrt{2}v$.

39. **W** A 1 000-kg satellite orbits the Earth at a constant altitude of 100 km. (a) How much energy must be added to the system to move the satellite into a circular orbit with altitude 200 km? What are the changes in the system's (b) kinetic energy and (c) potential energy?

40. A comet of mass 1.20×10^{10} kg moves in an elliptical orbit around the Sun. Its distance from the Sun ranges between 0.500 AU and 50.0 AU. (a) What is the eccentricity of its orbit? (b) What is its period? (c) At aphelion, what is the potential energy of the comet-Sun system? *Note:* 1 AU = one astronomical unit = the average distance from the Sun to the Earth = 1.496×10^{11} m.

41. An asteroid is on a collision course with Earth. An astronaut lands on the rock to bury explosive charges that will blow the asteroid apart. Most of the small fragments will miss the Earth, and those that fall into the atmo-

sphere will produce only a beautiful meteor shower. The astronaut finds that the density of the spherical asteroid is equal to the average density of the Earth. To ensure its pulverization, she incorporates into the explosives the rocket fuel and oxidizer intended for her return journey. What maximum radius can the asteroid have for her to be able to leave it entirely simply by jumping straight up? On Earth she can jump to a height of 0.500 m.

42. Derive an expression for the work required to move an Earth satellite of mass m from a circular orbit of radius $2R_E$ to one of radius $3R_E$.

43. (a) Determine the amount of work that must be done on a 100-kg payload to elevate it to a height of 1 000 km above the Earth's surface. (b) Determine the amount of additional work that is required to put the payload into circular orbit at this elevation.

44. (a) What is the minimum speed, relative to the Sun, necessary for a spacecraft to escape the solar system if it starts at the Earth's orbit? (b) *Voyager 1* achieved a maximum speed of 125 000 km/h on its way to photograph Jupiter. Beyond what distance from the Sun is this speed sufficient to escape the solar system?

45. A satellite of mass 200 kg is placed into Earth orbit at a height of 200 km above the surface. (a) Assuming a circular orbit, how long does the satellite take to complete one orbit? (b) What is the satellite's speed? (c) Starting from the satellite on the Earth's surface, what is the minimum energy input necessary to place this satellite in orbit? Ignore air resistance but include the effect of the planet's daily rotation.

46. A satellite of mass m , originally on the surface of the Earth, is placed into Earth orbit at an altitude h . (a) Assuming a circular orbit, how long does the satellite take to complete one orbit? (b) What is the satellite's speed? (c) What is the minimum energy input necessary to place this satellite in orbit? Ignore air resistance but include the effect of the planet's daily rotation. Represent the mass and radius of the Earth as M_E and R_E , respectively.

47. Ganymede is the largest of Jupiter's moons. Consider a rocket on the surface of Ganymede, at the point farthest from the planet (Fig. P13.47). Model the rocket as a particle. (a) Does the presence of Ganymede make Jupiter exert a larger, smaller, or same size force on the rocket compared with the force it would exert if Ganymede were not interposed? (b) Determine the escape speed for the rocket from the planet-satellite system. The radius of Ganymede is 2.64×10^6 m, and its mass



Figure P13.47

is 1.495×10^{23} kg. The distance between Jupiter and Ganymede is 1.071×10^9 m, and the mass of Jupiter is 1.90×10^{27} kg. Ignore the motion of Jupiter and Ganymede as they revolve about their center of mass.

48. A satellite moves around the Earth in a circular orbit of radius r . (a) What is the speed v_i of the satellite? (b) Suddenly, an explosion breaks the satellite into two pieces, with masses m and $4m$. Immediately after the explosion, the smaller piece of mass m is stationary with respect to the Earth and falls directly toward the Earth. What is the speed v of the larger piece immediately after the explosion? (c) Because of the increase in its speed, this larger piece now moves in a new elliptical orbit. Find its distance away from the center of the Earth when it reaches the other end of the ellipse.
49. At the Earth's surface, a projectile is launched straight up at a speed of 10.0 km/s. To what height will it rise? Ignore air resistance.

Additional Problems

50. A rocket is fired straight up through the atmosphere from the South Pole, burning out at an altitude of 250 km when traveling at 6.00 km/s. (a) What maximum distance from the Earth's surface does it travel before falling back to the Earth? (b) Would its maximum distance from the surface be larger if the same rocket were fired with the same fuel load from a launch site on the equator? Why or why not?
51. **Review.** A cylindrical habitat in space 6.00 km in diameter and 30.0 km long has been proposed (by G. K. O'Neill, 1974). Such a habitat would have cities, land, and lakes on the inside surface and air and clouds in the center. They would all be held in place by rotation of the cylinder about its long axis. How fast would the cylinder have to rotate to imitate the Earth's gravitational field at the walls of the cylinder?
52. *Voyager 1* and *Voyager 2* surveyed the surface of Jupiter's moon Io and photographed active volcanoes spewing liquid sulfur to heights of 70 km above the surface of this moon. Find the speed with which the liquid sulfur left the volcano. Io's mass is 8.9×10^{22} kg, and its radius is 1 820 km.
53. **M** A satellite is in a circular orbit around the Earth at an altitude of 2.80×10^6 m. Find (a) the period of the orbit, (b) the speed of the satellite, and (c) the acceleration of the satellite.
54. *Why is the following situation impossible?* A spacecraft is launched into a circular orbit around the Earth and circles the Earth once an hour.
55. Let Δg_M represent the difference in the gravitational fields produced by the Moon at the points on the Earth's surface nearest to and farthest from the Moon. Find the fraction $\Delta g_M/g$, where g is the Earth's gravitational field. (This difference is responsible for the occurrence of the *lunar tides* on the Earth.)
56. A sleeping area for a long space voyage consists of two cabins each connected by a cable to a central hub as shown in Figure P13.56. The cabins are set spinning

around the hub axis, which is connected to the rest of the spacecraft to generate artificial gravity in the cabins. A space traveler lies in a bed parallel to the outer wall as shown in Figure P13.56. (a) With $r = 10.0$ m, what would the angular speed of the 60.0-kg traveler need to be if he is to experience half his normal Earth weight? (b) If the astronaut stands up perpendicular to the bed, without holding on to anything with his hands, will his head be moving at a faster, a slower, or the same tangential speed as his feet? Why? (c) Why is the action in part (b) dangerous?

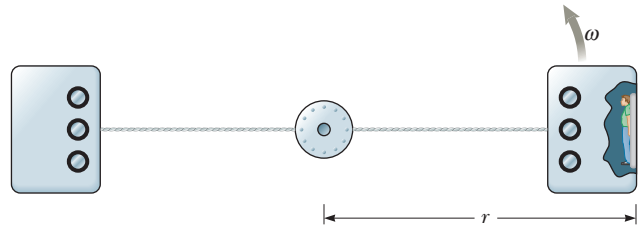


Figure P13.56

57. (a) A space vehicle is launched vertically upward from the Earth's surface with an initial speed of 8.76 km/s, which is less than the escape speed of 11.2 km/s. What maximum height does it attain? (b) A meteoroid falls toward the Earth. It is essentially at rest with respect to the Earth when it is at a height of 2.51×10^7 m above the Earth's surface. With what speed does the meteorite (a meteoroid that survives to impact the Earth's surface) strike the Earth?
58. (a) A space vehicle is launched vertically upward from the Earth's surface with an initial speed of v_i that is comparable to but less than the escape speed v_{esc} . What maximum height does it attain? (b) A meteoroid falls toward the Earth. It is essentially at rest with respect to the Earth when it is at a height h above the Earth's surface. With what speed does the meteorite (a meteoroid that survives to impact the Earth's surface) strike the Earth? (c) **What If?** Assume a baseball is tossed up with an initial speed that is very small compared to the escape speed. Show that the result from part (a) is consistent with Equation 4.12.
59. Assume you are agile enough to run across a horizontal surface at 8.50 m/s, independently of the value of the gravitational field. What would be (a) the radius and (b) the mass of an airless spherical asteroid of uniform density 1.10×10^3 kg/m³ on which you could launch yourself into orbit by running? (c) What would be your period? (d) Would your running significantly affect the rotation of the asteroid? Explain.
60. **GP** Two spheres having masses M and $2M$ and radii R and $3R$, respectively, are simultaneously released from rest when the distance between their centers is $12R$. Assume the two spheres interact only with each other and we wish to find the speeds with which they collide. (a) What *two* isolated system models are appropriate for this system? (b) Write an equation from one of the models and solve it for \vec{v}_1 , the velocity of the sphere of mass M at any time after release in terms of \vec{v}_2 , the velocity

ity of $2M$. (c) Write an equation from the other model and solve it for speed v_1 in terms of speed v_2 when the spheres collide. (d) Combine the two equations to find the two speeds v_1 and v_2 when the spheres collide.

- 61.** Two hypothetical planets of masses m_1 and m_2 and radii r_1 and r_2 , respectively, are nearly at rest when they are an infinite distance apart. Because of their gravitational attraction, they head toward each other on a collision course. (a) When their center-to-center separation is d , find expressions for the speed of each planet and for their relative speed. (b) Find the kinetic energy of each planet just before they collide, taking $m_1 = 2.00 \times 10^{24}$ kg, $m_2 = 8.00 \times 10^{24}$ kg, $r_1 = 3.00 \times 10^6$ m, and $r_2 = 5.00 \times 10^6$ m. *Note:* Both the energy and momentum of the isolated two-planet system are constant.

- 62.** (a) Show that the rate of change of the free-fall acceleration with vertical position near the Earth's surface is

$$\frac{dg}{dr} = -\frac{2GM_E}{R_E^3}$$

This rate of change with position is called a *gradient*. (b) Assuming h is small in comparison to the radius of the Earth, show that the difference in free-fall acceleration between two points separated by vertical distance h is

$$|\Delta g| = \frac{2GM_E h}{R_E^3}$$

(c) Evaluate this difference for $h = 6.00$ m, a typical height for a two-story building.

- 63.** A ring of matter is a familiar structure in planetary and stellar astronomy. Examples include Saturn's rings and a ring nebula. Consider a uniform ring of mass 2.36×10^{20} kg and radius 1.00×10^8 m. An object of mass $1\,000$ kg is placed at a point A on the axis of the ring, 2.00×10^8 m from the center of the ring (Fig. P13.63). When the object is released, the attraction of the ring makes the object move along the axis toward the center of the ring (point B). (a) Calculate the gravitational



NASA

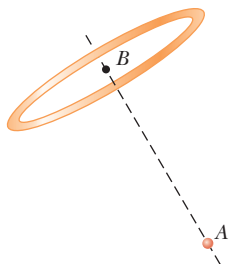


Figure P13.63

potential energy of the object–ring system when the object is at A . (b) Calculate the gravitational potential energy of the system when the object is at B . (c) Calculate the speed of the object as it passes through B .

- 64.** A spacecraft of mass 1.00×10^4 kg is in a circular orbit at an altitude of 500 km above the Earth's surface. Mission Control wants to fire the engines in a direction tangent to the orbit so as to put the spacecraft in an elliptical orbit around the Earth with an apogee of 2.00×10^4 km, measured from the Earth's center. How much energy must be used from the fuel to achieve this orbit? (Assume that all the fuel energy goes into increasing the orbital energy. This model will give a lower limit to the required energy because some of the energy from the fuel will appear as internal energy in the hot exhaust gases and engine parts.)

- 65. Review.** As an astronaut, you observe a small planet to be spherical. After landing on the planet, you set off, walking always straight ahead, and find yourself returning to your spacecraft from the opposite side after completing a lap of 25.0 km. You hold a hammer and a falcon feather at a height of 1.40 m, release them, and observe that they fall together to the surface in 29.2 s. Determine the mass of the planet.

- 66.** A certain quaternary star system consists of three stars, each of mass m , moving in the same circular orbit of radius r about a central star of mass M . The stars orbit in the same sense and are positioned one-third of a revolution apart from one another. Show that the period of each of the three stars is given by

$$T = 2\pi \sqrt{\frac{r^3}{G(M + m/\sqrt{3})}}$$

- 67.** Studies of the relationship of the Sun to our galaxy—the Milky Way—have revealed that the Sun is located near the outer edge of the galactic disc, about $30\,000$ ly (1 ly = 9.46×10^{15} m) from the center. The Sun has an orbital speed of approximately 250 km/s around the galactic center. (a) What is the period of the Sun's galactic motion? (b) What is the order of magnitude of the mass of the Milky Way galaxy? (c) Suppose the galaxy is made mostly of stars of which the Sun is typical. What is the order of magnitude of the number of stars in the Milky Way?

- 68. Review.** Two identical hard spheres, each of mass m and radius r , are released from rest in otherwise empty space with their centers separated by the distance R . They are allowed to collide under the influence of their gravitational attraction. (a) Show that the magnitude of the impulse received by each sphere before they make contact is given by $[Gm^3(1/2r - 1/R)]^{1/2}$. (b) **What If?** Find the magnitude of the impulse each receives during their contact if they collide elastically.

- 69.** The maximum distance from the Earth to the Sun (at aphelion) is 1.521×10^{11} m, and the distance of closest approach (at perihelion) is 1.471×10^{11} m. The Earth's orbital speed at perihelion is 3.027×10^4 m/s. Determine (a) the Earth's orbital speed at aphelion and the kinetic and potential energies of the Earth–Sun system

(b) at perihelion and (c) at aphelion. (d) Is the total energy of the system constant? Explain. Ignore the effect of the Moon and other planets.

70. Many people assume air resistance acting on a moving object will always make the object slow down. It can, however, actually be responsible for making the object speed up. Consider a 100-kg Earth satellite in a circular orbit at an altitude of 200 km. A small force of air resistance makes the satellite drop into a circular orbit with an altitude of 100 km. (a) Calculate the satellite's initial speed. (b) Calculate its final speed in this process. (c) Calculate the initial energy of the satellite–Earth system. (d) Calculate the final energy of the system. (e) Show that the system has lost mechanical energy and find the amount of the loss due to friction. (f) What force makes the satellite's speed increase? *Hint:* You will find a free-body diagram useful in explaining your answer.
71. X-ray pulses from Cygnus X-1, the first black hole to be identified and a celestial x-ray source, have been recorded during high-altitude rocket flights. The signals can be interpreted as originating when a blob of ionized matter orbits a black hole with a period of 5.0 ms. If the blob is in a circular orbit about a black hole whose mass is $20M_{\text{Sun}}$, what is the orbit radius?
72. Show that the minimum period for a satellite in orbit around a spherical planet of uniform density ρ is

$$T_{\text{min}} = \sqrt{\frac{3\pi}{G\rho}}$$

independent of the planet's radius.

73. Astronomers detect a distant meteoroid moving along a straight line that, if extended, would pass at a distance $3R_E$ from the center of the Earth, where R_E is the Earth's radius. What minimum speed must the meteoroid have if it is *not* to collide with the Earth?

74. Two stars of masses M and m , separated by a distance d , revolve in circular orbits about their center of mass (Fig. P13.74). Show that each star has a period given by

$$T^2 = \frac{4\pi^2 d^3}{G(M+m)}$$

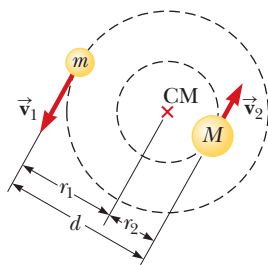


Figure P13.74

75. Two identical particles, each of mass 1 000 kg, are coasting in free space along the same path, one in front of the other by 20.0 m. At the instant their separation distance has this value, each particle has precisely the same velocity of $800 \hat{i}$ m/s. What are their precise velocities when they are 2.00 m apart?
76. Consider an object of mass m , not necessarily small compared with the mass of the Earth, released at a distance of 1.20×10^7 m from the center of the Earth. Assume the Earth and the object behave as a pair of

particles, isolated from the rest of the Universe. (a) Find the magnitude of the acceleration a_{rel} with which each starts to move relative to the other as a function of m . Evaluate the acceleration (b) for $m = 5.00$ kg, (c) for $m = 2\,000$ kg, and (d) for $m = 2.00 \times 10^{24}$ kg. (e) Describe the pattern of variation of a_{rel} with m .

77. As thermonuclear fusion proceeds in its core, the Sun loses mass at a rate of 3.64×10^9 kg/s. During the 5 000-yr period of recorded history, by how much has the length of the year changed due to the loss of mass from the Sun? *Suggestions:* Assume the Earth's orbit is circular. No external torque acts on the Earth–Sun system, so the angular momentum of the Earth is constant.

Challenge Problems

78. The Solar and Heliospheric Observatory (SOHO) spacecraft has a special orbit, located between the Earth and the Sun along the line joining them, and it is always close enough to the Earth to transmit data easily. Both objects exert gravitational forces on the observatory. It moves around the Sun in a near-circular orbit that is smaller than the Earth's circular orbit. Its period, however, is not less than 1 yr but just equal to 1 yr. Show that its distance from the Earth must be 1.48×10^9 m. In 1772, Joseph Louis Lagrange determined theoretically the special location allowing this orbit. *Suggestions:* Use data that are precise to four digits. The mass of the Earth is 5.974×10^{24} kg. You will not be able to easily solve the equation you generate; instead, use a computer to verify that 1.48×10^9 m is the correct value.
79. The oldest artificial satellite still in orbit is *Vanguard I*, launched March 3, 1958. Its mass is 1.60 kg. Neglecting atmospheric drag, the satellite would still be in its initial orbit, with a minimum distance from the center of the Earth of 7.02 Mm and a speed at this perigee point of 8.23 km/s. For this orbit, find (a) the total energy of the satellite–Earth system and (b) the magnitude of the angular momentum of the satellite. (c) At apogee, find the satellite's speed and its distance from the center of the Earth. (d) Find the semimajor axis of its orbit. (e) Determine its period.
80. A spacecraft is approaching Mars after a long trip from the Earth. Its velocity is such that it is traveling along a parabolic trajectory under the influence of the gravitational force from Mars. The distance of closest approach will be 300 km above the Martian surface. At this point of closest approach, the engines will be fired to slow down the spacecraft and place it in a circular orbit 300 km above the surface. (a) By what percentage must the speed of the spacecraft be reduced to achieve the desired orbit? (b) How would the answer to part (a) change if the distance of closest approach and the desired circular orbit altitude were 600 km instead of 300 km? (*Note:* The energy of the spacecraft–Mars system for a parabolic orbit is $E = 0$.)

Fluid Mechanics



- 14.1 Pressure
- 14.2 Variation of Pressure with Depth
- 14.3 Pressure Measurements
- 14.4 Buoyant Forces and Archimedes's Principle
- 14.5 Fluid Dynamics
- 14.6 Bernoulli's Equation
- 14.7 Other Applications of Fluid Dynamics

Matter is normally classified as being in one of three states: solid, liquid, or gas. From everyday experience we know that a solid has a definite volume and shape, a liquid has a definite volume but no definite shape, and an unconfined gas has neither a definite volume nor a definite shape. These descriptions help us picture the states of matter, but they are somewhat artificial. For example, asphalt and plastics are normally considered solids, but over long time intervals they tend to flow like liquids. Likewise, most substances can be a solid, a liquid, or a gas (or a combination of any of these three), depending on the temperature and pressure. In general, the time interval required for a particular substance to change its shape in response to an external force determines whether we treat the substance as a solid, a liquid, or a gas.

A **fluid** is a collection of molecules that are randomly arranged and held together by weak cohesive forces and by forces exerted by the walls of a container. Both liquids and gases are fluids.

In our treatment of the mechanics of fluids, we'll be applying principles and analysis models that we have already discussed. First, we consider the mechanics of a fluid at rest, that is, *fluid statics*, and then study fluids in motion, that is, *fluid dynamics*.

14.1 Pressure

Fluids do not sustain shearing stresses or tensile stresses such as those discussed in Chapter 12; therefore, the only stress that can be exerted on an object submerged in a static fluid is one that tends to compress the object from all sides. In other words, the force exerted by a static fluid on an object is always perpendicular to the surfaces of the object as shown in Figure 14.1. We discussed this situation in Section 12.4.

Fish congregate around a reef in Hawaii searching for food. How do fish such as the lined butterflyfish (*Chaetodon lineolatus*) at the upper left control their movements up and down in the water? We'll find out in this chapter. (Vlad61/Shutterstock.com)

At any point on the surface of the object, the force exerted by the fluid is perpendicular to the surface of the object.

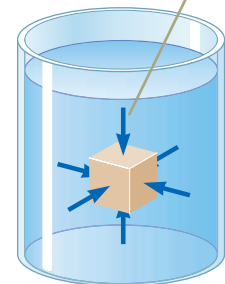


Figure 14.1 The forces exerted by a fluid on the surfaces of a submerged object.

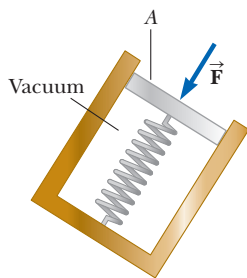


Figure 14.2 A simple device for measuring the pressure exerted by a fluid.

The pressure in a fluid can be measured with the device pictured in Figure 14.2. The device consists of an evacuated cylinder that encloses a light piston connected to a spring. As the device is submerged in a fluid, the fluid presses on the top of the piston and compresses the spring until the inward force exerted by the fluid is balanced by the outward force exerted by the spring. The fluid pressure can be measured directly if the spring is calibrated in advance. If F is the magnitude of the force exerted on the piston and A is the surface area of the piston, the **pressure** P of the fluid at the level to which the device has been submerged is defined as the ratio of the force to the area:

$$P \equiv \frac{F}{A} \quad (14.1)$$

Pressure is a scalar quantity because it is proportional to the magnitude of the force on the piston.

If the pressure varies over an area, the infinitesimal force dF on an infinitesimal surface element of area dA is

$$dF = P dA \quad (14.2)$$

where P is the pressure at the location of the area dA . To calculate the total force exerted on a surface of a container, we must integrate Equation 14.2 over the surface.

The units of pressure are newtons per square meter (N/m^2) in the SI system. Another name for the SI unit of pressure is the **pascal** (Pa):

$$1 \text{ Pa} \equiv 1 \text{ N}/\text{m}^2 \quad (14.3)$$

For a tactile demonstration of the definition of pressure, hold a tack between your thumb and forefinger, with the point of the tack on your thumb and the head of the tack on your forefinger. Now *gently* press your thumb and forefinger together. Your thumb will begin to feel pain immediately while your forefinger will not. The tack is exerting the same force on both your thumb and forefinger, but the pressure on your thumb is much larger because of the small area over which the force is applied.

Pitfall Prevention 14.1

Force and Pressure Equations 14.1 and 14.2 make a clear distinction between force and pressure. Another important distinction is that *force is a vector* and *pressure is a scalar*. There is no direction associated with pressure, but the direction of the force associated with the pressure is perpendicular to the surface on which the pressure acts.

- Quick Quiz 14.1** Suppose you are standing directly behind someone who steps back and accidentally stomps on your foot with the heel of one shoe. Would you be better off if that person were (a) a large, male professional basketball player wearing sneakers or (b) a petite woman wearing spike-heeled shoes?

Example 14.1 The Water Bed

The mattress of a water bed is 2.00 m long by 2.00 m wide and 30.0 cm deep.

(A) Find the weight of the water in the mattress.

SOLUTION

Conceptualize Think about carrying a jug of water and how heavy it is. Now imagine a sample of water the size of a water bed. We expect the weight to be relatively large.

Categorize This example is a substitution problem.

Find the volume of the water filling the mattress:

$$V = (2.00 \text{ m})(2.00 \text{ m})(0.300 \text{ m}) = 1.20 \text{ m}^3$$

Use Equation 1.1 and the density of fresh water (see Table 14.1) to find the mass of the water bed:

$$M = \rho V = (1\,000 \text{ kg}/\text{m}^3)(1.20 \text{ m}^3) = 1.20 \times 10^3 \text{ kg}$$

Find the weight of the bed:

$$Mg = (1.20 \times 10^3 \text{ kg})(9.80 \text{ m}/\text{s}^2) = 1.18 \times 10^4 \text{ N}$$

which is approximately 2 650 lb. (A regular bed, including mattress, box spring, and metal frame, weighs approximately 300 lb.) Because this load is so great, it is best to place a water bed in the basement or on a sturdy, well-supported floor.

▶ 14.1 continued

(B) Find the pressure exerted by the water bed on the floor when the bed rests in its normal position. Assume the entire lower surface of the bed makes contact with the floor.

SOLUTION

When the water bed is in its normal position, the area in contact with the floor is 4.00 m^2 . Use Equation 14.1 to find the pressure:

$$P = \frac{1.18 \times 10^4 \text{ N}}{4.00 \text{ m}^2} = 2.94 \times 10^3 \text{ Pa}$$

WHAT IF? What if the water bed is replaced by a 300-lb regular bed that is supported by four legs? Each leg has a circular cross section of radius 2.00 cm. What pressure does this bed exert on the floor?

Answer The weight of the regular bed is distributed over four circular cross sections at the bottom of the legs. Therefore, the pressure is

$$\begin{aligned} P &= \frac{F}{A} = \frac{mg}{4(\pi r^2)} = \frac{300 \text{ lb}}{4\pi(0.0200 \text{ m})^2} \left(\frac{1 \text{ N}}{0.225 \text{ lb}} \right) \\ &= 2.65 \times 10^5 \text{ Pa} \end{aligned}$$

This result is almost 100 times larger than the pressure due to the water bed! The weight of the regular bed, even though it is much less than the weight of the water bed, is applied over the very small area of the four legs. The high pressure on the floor at the feet of a regular bed could cause dents in wood floors or permanently crush carpet pile.

14.2 Variation of Pressure with Depth

As divers well know, water pressure increases with depth. Likewise, atmospheric pressure decreases with increasing altitude; for this reason, aircraft flying at high altitudes must have pressurized cabins for the comfort of the passengers.

We now show how the pressure in a liquid increases with depth. As Equation 1.1 describes, the *density* of a substance is defined as its mass per unit volume; Table 14.1 lists the densities of various substances. These values vary slightly with temperature because the volume of a substance is dependent on temperature (as shown in Chapter 19). Under standard conditions (at 0°C and at atmospheric pressure), the densities of gases are about $\frac{1}{1000}$ the densities of solids and liquids. This difference in densities implies that the average molecular spacing in a gas under these conditions is about ten times greater than that in a solid or liquid.

Table 14.1 Densities of Some Common Substances at Standard Temperature (0°C) and Pressure (Atmospheric)

Substance	ρ (kg/m^3)	Substance	ρ (kg/m^3)
Air	1.29	Iron	7.86×10^3
Air (at 20°C and atmospheric pressure)	1.20	Lead	11.3×10^3
Aluminum	2.70×10^3	Mercury	13.6×10^3
Benzene	0.879×10^3	Nitrogen gas	1.25
Brass	8.4×10^3	Oak	0.710×10^3
Copper	8.92×10^3	Osmium	22.6×10^3
Ethyl alcohol	0.806×10^3	Oxygen gas	1.43
Fresh water	1.00×10^3	Pine	0.373×10^3
Glycerin	1.26×10^3	Platinum	21.4×10^3
Gold	19.3×10^3	Seawater	1.03×10^3
Helium gas	1.79×10^{-1}	Silver	10.5×10^3
Hydrogen gas	8.99×10^{-2}	Tin	7.30×10^3
Ice	0.917×10^3	Uranium	19.1×10^3

The parcel of fluid is in equilibrium, so the net force on it is zero.

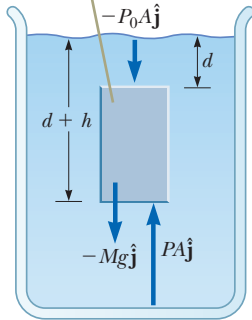


Figure 14.3 A parcel of fluid in a larger volume of fluid is singled out.

Variation of pressure with depth ▶

Now consider a liquid of density ρ at rest as shown in Figure 14.3. We assume ρ is uniform throughout the liquid, which means the liquid is incompressible. Let us select a parcel of the liquid contained within an imaginary block of cross-sectional area A extending from depth d to depth $d + h$. The liquid external to our parcel exerts forces at all points on the surface of the parcel, perpendicular to the surface. The pressure exerted by the liquid on the bottom face of the parcel is P , and the pressure on the top face is P_0 . Therefore, the upward force exerted by the outside fluid on the bottom of the parcel has a magnitude PA , and the downward force exerted on the top has a magnitude $P_0 A$. The mass of liquid in the parcel is $M = \rho V = \rho Ah$; therefore, the weight of the liquid in the parcel is $Mg = \rho Ahg$. Because the parcel is at rest and remains at rest, it can be modeled as a particle in equilibrium, so that the net force acting on it must be zero. Choosing upward to be the positive y direction, we see that

$$\sum \vec{F} = PA\hat{j} - P_0 A\hat{j} - Mg\hat{j} = 0$$

or

$$PA - P_0 A - \rho Ahg = 0$$

$$P = P_0 + \rho gh$$

(14.4)

That is, the pressure P at a depth h below a point in the liquid at which the pressure is P_0 is greater by an amount ρgh . If the liquid is open to the atmosphere and P_0 is the pressure at the surface of the liquid, then P_0 is **atmospheric pressure**. In our calculations and working of end-of-chapter problems, we usually take atmospheric pressure to be

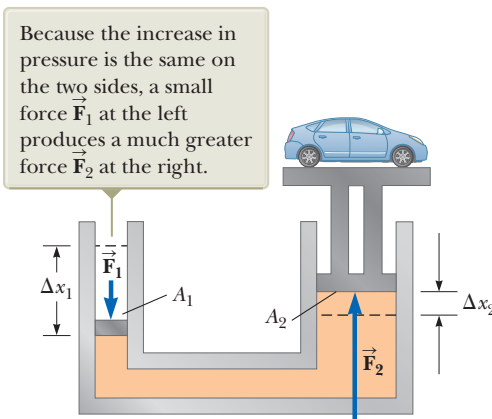
$$P_0 = 1.00 \text{ atm} = 1.013 \times 10^5 \text{ Pa}$$

Equation 14.4 implies that the pressure is the same at all points having the same depth, independent of the shape of the container.

Because the pressure in a fluid depends on depth and on the value of P_0 , any increase in pressure at the surface must be transmitted to every other point in the fluid. This concept was first recognized by French scientist Blaise Pascal (1623–1662) and is called **Pascal's law: a change in the pressure applied to a fluid is transmitted undiminished to every point of the fluid and to the walls of the container**.

Pascal's law ▶

An important application of Pascal's law is the hydraulic press illustrated in Figure 14.4a. A force of magnitude F_1 is applied to a small piston of surface area A_1 . The pressure is transmitted through an incompressible liquid to a larger piston of surface area A_2 . Because the pressure must be the same on both sides, $P = F_1/A_1 = F_2/A_2$. Therefore, the force F_2 is greater than the force F_1 by a factor of A_2/A_1 . By designing a hydraulic press with appropriate areas A_1 and A_2 , a large out-



a



Sam Jordash/Digital Vision/Getty Images

b

Figure 14.4 (a) Diagram of a hydraulic press. (b) A vehicle undergoing repair is supported by a hydraulic lift in a garage.

put force can be applied by means of a small input force. Hydraulic brakes, car lifts, hydraulic jacks, and forklifts all make use of this principle (Fig. 14.4b).

Because liquid is neither added to nor removed from the system, the volume of liquid pushed down on the left in Figure 14.4a as the piston moves downward through a displacement Δx_1 equals the volume of liquid pushed up on the right as the right piston moves upward through a displacement Δx_2 . That is, $A_1 \Delta x_1 = A_2 \Delta x_2$; therefore, $A_2/A_1 = \Delta x_1/\Delta x_2$. We have already shown that $A_2/A_1 = F_2/F_1$. Therefore, $F_2/F_1 = \Delta x_1/\Delta x_2$, so $F_1 \Delta x_1 = F_2 \Delta x_2$. Each side of this equation is the work done by the force on its respective piston. Therefore, the work done by \vec{F}_1 on the input piston equals the work done by \vec{F}_2 on the output piston, as it must to conserve energy. (The process can be modeled as a special case of the nonisolated system model: the *nonisolated system in steady state*. There is energy transfer into and out of the system, but these energy transfers balance, so that there is no net change in the energy of the system.)

- Quick Quiz 14.2** The pressure at the bottom of a filled glass of water ($\rho = 1\,000\text{ kg/m}^3$) is P . The water is poured out, and the glass is filled with ethyl alcohol ($\rho = 806\text{ kg/m}^3$). What is the pressure at the bottom of the glass? (a) smaller than P (b) equal to P (c) larger than P (d) indeterminate

Example 14.2 The Car Lift

In a car lift used in a service station, compressed air exerts a force on a small piston that has a circular cross section of radius 5.00 cm. This pressure is transmitted by a liquid to a piston that has a radius of 15.0 cm.

- (A)** What force must the compressed air exert to lift a car weighing 13 300 N?

SOLUTION

Conceptualize Review the material just discussed about Pascal's law to understand the operation of a car lift.

Categorize This example is a substitution problem.

Solve $F_1/A_1 = F_2/A_2$ for F_1 :

$$F_1 = \left(\frac{A_1}{A_2}\right)F_2 = \frac{\pi(5.00 \times 10^{-2}\text{ m})^2}{\pi(15.0 \times 10^{-2}\text{ m})^2}(1.33 \times 10^4\text{ N})$$

$$= 1.48 \times 10^3\text{ N}$$

- (B)** What air pressure produces this force?

SOLUTION

Use Equation 14.1 to find the air pressure that produces this force:

$$P = \frac{F_1}{A_1} = \frac{1.48 \times 10^3\text{ N}}{\pi(5.00 \times 10^{-2}\text{ m})^2}$$

$$= 1.88 \times 10^5\text{ Pa}$$

This pressure is approximately twice atmospheric pressure.

Example 14.3 A Pain in Your Ear

Estimate the force exerted on your eardrum due to the water when you are swimming at the bottom of a pool that is 5.0 m deep.

SOLUTION

Conceptualize As you descend in the water, the pressure increases. You may have noticed this increased pressure in your ears while diving in a swimming pool, a lake, or the ocean. We can find the pressure difference exerted on the

continued

14.3 continued

eardrum from the depth given in the problem; then, after estimating the ear drum's surface area, we can determine the net force the water exerts on it.

Categorize This example is a substitution problem.

The air inside the middle ear is normally at atmospheric pressure P_0 . Therefore, to find the net force on the eardrum, we must consider the difference between the total pressure at the bottom of the pool and atmospheric pressure. Let's estimate the surface area of the eardrum to be approximately $1 \text{ cm}^2 = 1 \times 10^{-4} \text{ m}^2$.

Use Equation 14.4 to find this pressure difference:

$$P_{\text{bot}} - P_0 = \rho gh$$

$$= (1.00 \times 10^3 \text{ kg/m}^3)(9.80 \text{ m/s}^2)(5.0 \text{ m}) = 4.9 \times 10^4 \text{ Pa}$$

Use Equation 14.1 to find the magnitude of the net force on the ear:

$$F = (P_{\text{bot}} - P_0)A = (4.9 \times 10^4 \text{ Pa})(1 \times 10^{-4} \text{ m}^2) \approx 5 \text{ N}$$

Because a force of this magnitude on the eardrum is extremely uncomfortable, swimmers often “pop their ears” while under water, an action that pushes air from the lungs into the middle ear. Using this technique equalizes the pressure on the two sides of the eardrum and relieves the discomfort.

Example 14.4 The Force on a Dam

Water is filled to a height H behind a dam of width w (Fig. 14.5). Determine the resultant force exerted by the water on the dam.

SOLUTION

Conceptualize Because pressure varies with depth, we cannot calculate the force simply by multiplying the area by the pressure. As the pressure in the water increases with depth, the force on the adjacent portion of the dam also increases.

Categorize Because of the variation of pressure with depth, we must use integration to solve this example, so we categorize it as an analysis problem.

Analyze Let's imagine a vertical y axis, with $y = 0$ at the bottom of the dam. We divide the face of the dam into narrow horizontal strips at a distance y above the bottom, such as the red strip in Figure 14.5. The pressure on each such strip is due only to the water; atmospheric pressure acts on both sides of the dam.

Use Equation 14.4 to calculate the pressure due to the water at the depth h :

$$P = \rho gh = \rho g(H - y)$$

Use Equation 14.2 to find the force exerted on the shaded strip of area $dA = w dy$:

$$dF = P dA = \rho g(H - y)w dy$$

Integrate to find the total force on the dam:

$$F = \int P dA = \int_0^H \rho g(H - y)w dy = \frac{1}{2} \rho g w H^2$$

Finalize Notice that the thickness of the dam shown in Figure 14.5 increases with depth. This design accounts for the greater force the water exerts on the dam at greater depths.

WHAT IF? What if you were asked to find this force without using calculus? How could you determine its value?

Answer We know from Equation 14.4 that pressure varies linearly with depth. Therefore, the average pressure due to the water over the face of the dam is the average of the pressure at the top and the pressure at the bottom:

$$P_{\text{avg}} = \frac{P_{\text{top}} + P_{\text{bottom}}}{2} = \frac{0 + \rho gH}{2} = \frac{1}{2} \rho gH$$

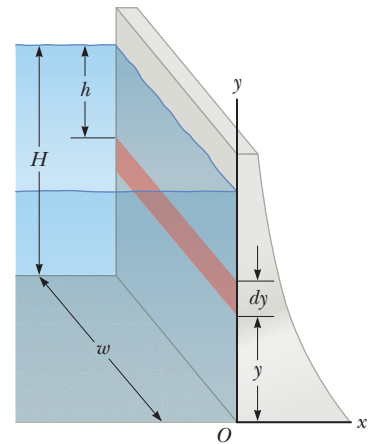


Figure 14.5 (Example 14.4) Water exerts a force on a dam.

14.4 continued

The total force on the dam is equal to the product of the average pressure and the area of the face of the dam:

$$F = P_{\text{avg}}A = \left(\frac{1}{2}\rho gH\right)(Hw) = \frac{1}{2}\rho gwH^2$$

which is the same result we obtained using calculus.

14.3 Pressure Measurements

During the weather report on a television news program, the *barometric pressure* is often provided. This reading is the current local pressure of the atmosphere, which varies over a small range from the standard value provided earlier. How is this pressure measured?

One instrument used to measure atmospheric pressure is the common barometer, invented by Evangelista Torricelli (1608–1647). A long tube closed at one end is filled with mercury and then inverted into a dish of mercury (Fig. 14.6a). The closed end of the tube is nearly a vacuum, so the pressure at the top of the mercury column can be taken as zero. In Figure 14.6a, the pressure at point A, due to the column of mercury, must equal the pressure at point B, due to the atmosphere. If that were not the case, there would be a net force that would move mercury from one point to the other until equilibrium is established. Therefore, $P_0 = \rho_{\text{Hg}}gh$, where ρ_{Hg} is the density of the mercury and h is the height of the mercury column. As atmospheric pressure varies, the height of the mercury column varies, so the height can be calibrated to measure atmospheric pressure. Let us determine the height of a mercury column for one atmosphere of pressure, $P_0 = 1 \text{ atm} = 1.013 \times 10^5 \text{ Pa}$:

$$P_0 = \rho_{\text{Hg}}gh \rightarrow h = \frac{P_0}{\rho_{\text{Hg}}g} = \frac{1.013 \times 10^5 \text{ Pa}}{(13.6 \times 10^3 \text{ kg/m}^3)(9.80 \text{ m/s}^2)} = 0.760 \text{ m}$$

Based on such a calculation, one atmosphere of pressure is defined to be the pressure equivalent of a column of mercury that is exactly 0.760 0 m in height at 0°C.

A device for measuring the pressure of a gas contained in a vessel is the open-tube manometer illustrated in Figure 14.6b. One end of a U-shaped tube containing a liquid is open to the atmosphere, and the other end is connected to a container of gas at pressure P . In an equilibrium situation, the pressures at points A and B must be the same (otherwise, the curved portion of the liquid would experience a net force and would accelerate), and the pressure at A is the unknown pressure of the gas. Therefore, equating the unknown pressure P to the pressure at point B, we see that $P = P_0 + \rho gh$. Again, we can calibrate the height h to the pressure P .

The difference in the pressures in each part of Figure 14.6 (that is, $P - P_0$) is equal to ρgh . The pressure P is called the **absolute pressure**, and the difference $P - P_0$ is called the **gauge pressure**. For example, the pressure you measure in your bicycle tire is gauge pressure.

- Quick Quiz 14.3** Several common barometers are built, with a variety of fluids.
- ⋮ For which of the following fluids will the column of fluid in the barometer be
 - the highest? (a) mercury (b) water (c) ethyl alcohol (d) benzene

14.4 Buoyant Forces and Archimedes's Principle

Have you ever tried to push a beach ball down under water (Fig. 14.7a, p. 424)? It is extremely difficult to do because of the large upward force exerted by the water on the ball. The upward force exerted by a fluid on any immersed object is called

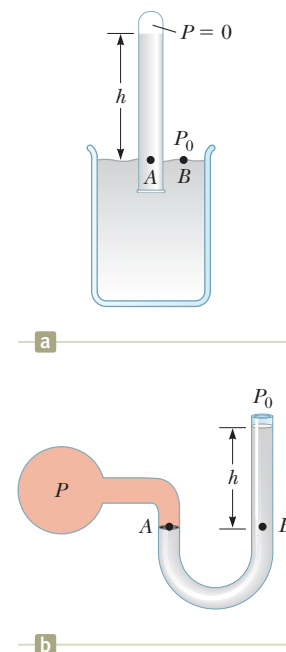


Figure 14.6 Two devices for measuring pressure: (a) a mercury barometer and (b) an open-tube manometer.



© iStockphoto.com/Hulton/Archive

Archimedes

Greek Mathematician, Physicist, and Engineer (c. 287–212 BC)

Archimedes was perhaps the greatest scientist of antiquity. He was the first to compute accurately the ratio of a circle's circumference to its diameter, and he also showed how to calculate the volume and surface area of spheres, cylinders, and other geometric shapes. He is well known for discovering the nature of the buoyant force and was also a gifted inventor. One of his practical inventions, still in use today, is Archimedes's screw, an inclined, rotating, coiled tube used originally to lift water from the holds of ships. He also invented the catapult and devised systems of levers, pulleys, and weights for raising heavy loads. Such inventions were successfully used to defend his native city, Syracuse, during a two-year siege by Romans.

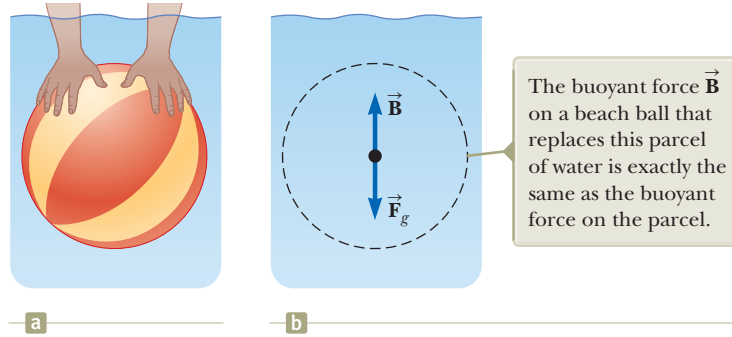


Figure 14.7 (a) A swimmer pushes a beach ball under water. (b) The forces on a beach ball–sized parcel of water.

a buoyant force. We can determine the magnitude of a buoyant force by applying some logic. Imagine a beach ball–sized parcel of water beneath the water surface as in Figure 14.7b. Because this parcel is in equilibrium, there must be an upward force that balances the downward gravitational force on the parcel. This upward force is the buoyant force, and its magnitude is equal to the weight of the water in the parcel. The buoyant force is the resultant force on the parcel due to all forces applied by the fluid surrounding the parcel.

Now imagine replacing the beach ball–sized parcel of water with a beach ball of the same size. The net force applied by the fluid surrounding the beach ball is the same, regardless of whether it is applied to a beach ball or to a parcel of water. Consequently, **the magnitude of the buoyant force on an object always equals the weight of the fluid displaced by the object.** This statement is known as **Archimedes's principle.**

With the beach ball under water, the buoyant force, equal to the weight of a beach ball–sized parcel of water, is much larger than the weight of the beach ball. Therefore, there is a large net upward force, which explains why it is so hard to hold the beach ball under the water. Note that Archimedes's principle does not refer to the makeup of the object experiencing the buoyant force. The object's composition is not a factor in the buoyant force because the buoyant force is exerted by the surrounding fluid.

To better understand the origin of the buoyant force, consider a cube of solid material immersed in a liquid as in Figure 14.8. According to Equation 14.4, the pressure P_{bot} at the bottom of the cube is greater than the pressure P_{top} at the top by an amount $\rho_{\text{fluid}}gh$, where h is the height of the cube and ρ_{fluid} is the density of the fluid. The pressure at the bottom of the cube causes an *upward* force equal to $P_{\text{bot}}A$, where A is the area of the bottom face. The pressure at the top of the cube causes a *downward* force equal to $P_{\text{top}}A$. The resultant of these two forces is the buoyant force \vec{B} with magnitude

$$B = (P_{\text{bot}} - P_{\text{top}})A = (\rho_{\text{fluid}}gh)A$$

$$B = \rho_{\text{fluid}}gV_{\text{disp}} \quad (14.5)$$

where $V_{\text{disp}} = Ah$ is the volume of the fluid displaced by the cube. Because the product $\rho_{\text{fluid}}V_{\text{disp}}$ is equal to the mass of fluid displaced by the object,

$$B = Mg$$

where Mg is the weight of the fluid displaced by the cube. This result is consistent with our initial statement about Archimedes's principle above, based on the discussion of the beach ball.

Under normal conditions, the weight of a fish in the opening photograph for this chapter is slightly greater than the buoyant force on the fish. Hence, the fish would sink if it did not have some mechanism for adjusting the buoyant force. The

The buoyant force on the cube is the resultant of the forces exerted on its top and bottom faces by the liquid.

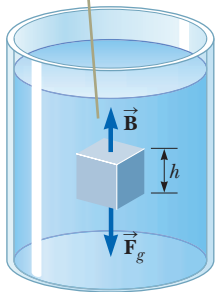


Figure 14.8 The external forces acting on an immersed cube are the gravitational force \vec{F}_g and the buoyant force \vec{B} .

fish accomplishes that by internally regulating the size of its air-filled swim bladder to increase its volume and the magnitude of the buoyant force acting on it, according to Equation 14.5. In this manner, fish are able to swim to various depths.

Before we proceed with a few examples, it is instructive to discuss two common situations: a totally submerged object and a floating (partly submerged) object.

Case 1: Totally Submerged Object When an object is totally submerged in a fluid of density ρ_{fluid} , the volume V_{disp} of the displaced fluid is equal to the volume V_{obj} of the object; so, from Equation 14.5, the magnitude of the upward buoyant force is $B = \rho_{\text{fluid}}gV_{\text{obj}}$. If the object has a mass M and density ρ_{obj} , its weight is equal to $F_g = Mg = \rho_{\text{obj}}gV_{\text{obj}}$, and the net force on the object is $B - F_g = (\rho_{\text{fluid}} - \rho_{\text{obj}})gV_{\text{obj}}$. Hence, if the density of the object is less than the density of the fluid, the downward gravitational force is less than the buoyant force and the unsupported object accelerates upward (Fig. 14.9a). If the density of the object is greater than the density of the fluid, the upward buoyant force is less than the downward gravitational force and the unsupported object sinks (Fig. 14.9b). If the density of the submerged object equals the density of the fluid, the net force on the object is zero and the object remains in equilibrium. Therefore, the direction of motion of an object submerged in a fluid is determined *only* by the densities of the object and the fluid.

Case 2: Floating Object Now consider an object of volume V_{obj} and density $\rho_{\text{obj}} < \rho_{\text{fluid}}$ in static equilibrium floating on the surface of a fluid, that is, an object that is only *partially* submerged (Fig. 14.10). In this case, the upward buoyant force is balanced by the downward gravitational force acting on the object. If V_{disp} is the volume of the fluid displaced by the object (this volume is the same as the volume of that part of the object beneath the surface of the fluid), the buoyant force has a magnitude $B = \rho_{\text{fluid}}gV_{\text{disp}}$. Because the weight of the object is $F_g = Mg = \rho_{\text{obj}}gV_{\text{obj}}$ and because $F_g = B$, we see that $\rho_{\text{fluid}}gV_{\text{disp}} = \rho_{\text{obj}}gV_{\text{obj}}$, or

$$\frac{V_{\text{disp}}}{V_{\text{obj}}} = \frac{\rho_{\text{obj}}}{\rho_{\text{fluid}}} \quad (14.6)$$

This equation shows that the fraction of the volume of a floating object that is below the fluid surface is equal to the ratio of the density of the object to that of the fluid.

Quick Quiz 14.4 You are shipwrecked and floating in the middle of the ocean on a raft. Your cargo on the raft includes a treasure chest full of gold that you found before your ship sank, and the raft is just barely afloat. To keep you floating as high as possible in the water, should you (a) leave the treasure chest on top of the raft, (b) secure the treasure chest to the underside of the raft, or (c) hang the treasure chest in the water with a rope attached to the raft? (Assume throwing the treasure chest overboard is not an option you wish to consider.)

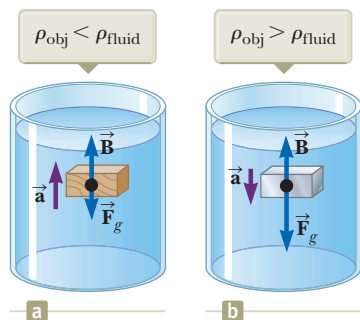


Figure 14.9 (a) A totally submerged object that is less dense than the fluid in which it is submerged experiences a net upward force and rises to the surface after it is released. (b) A totally submerged object that is denser than the fluid experiences a net downward force and sinks.

Pitfall Prevention 14.2

Buoyant Force Is Exerted by the Fluid Remember that **the buoyant force is exerted by the fluid**. It is not determined by properties of the object except for the amount of fluid displaced by the object. Therefore, if several objects of different densities but the same volume are immersed in a fluid, they will all experience the same buoyant force. Whether they sink or float is determined by the relationship between the buoyant force and the gravitational force.

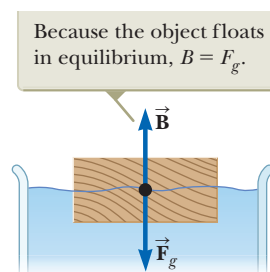


Figure 14.10 An object floating on the surface of a fluid experiences two forces, the gravitational force \vec{F}_g and the buoyant force \vec{B} .

Example 14.5

Eureka!

AM

Archimedes supposedly was asked to determine whether a crown made for the king consisted of pure gold. According to legend, he solved this problem by weighing the crown first in air and then in water as shown in Figure 14.11. Suppose the scale read 7.84 N when the crown was in air and 6.84 N when it was in water. What should Archimedes have told the king?

SOLUTION

Conceptualize Figure 14.11 helps us imagine what is happening in this example. Because of the buoyant force, the scale reading is smaller in Figure 14.11b than in Figure 14.11a.

Categorize This problem is an example of Case 1 discussed earlier because the crown is completely submerged. The scale reading is a measure of one of the forces on the crown, and the crown is stationary. Therefore, we can categorize the crown as a *particle in equilibrium*.

Analyze When the crown is suspended in air, the scale reads the true weight $T_1 = F_g$ (neglecting the small buoyant force due to the surrounding air). When the crown is immersed in water, the buoyant force \vec{B} reduces the scale reading to an *apparent weight* of $T_2 = F_g - B$.

Apply the particle in equilibrium model to the crown in water:

Solve for B :

Because this buoyant force is equal in magnitude to the weight of the displaced water, $B = \rho_w g V_{\text{disp}}$, where V_{disp} is the volume of the displaced water and ρ_w is its density. Also, the volume of the crown V_c is equal to the volume of the displaced water because the crown is completely submerged, so $B = \rho_w g V_c$.

Find the density of the crown from Equation 1.1:

Substitute numerical values:

Finalize From Table 14.1, we see that the density of gold is $19.3 \times 10^3 \text{ kg/m}^3$. Therefore, Archimedes should have reported that the king had been cheated. Either the crown was hollow, or it was not made of pure gold.

WHAT IF? Suppose the crown has the same weight but is indeed pure gold and not hollow. What would the scale reading be when the crown is immersed in water?

Answer Find the buoyant force on the crown:

Substitute numerical values:

Find the tension in the string hanging from the scale:

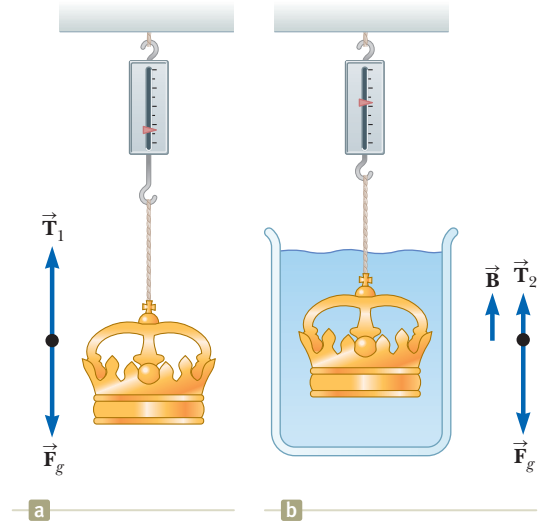


Figure 14.11 (Example 14.5) (a) When the crown is suspended in air, the scale reads its true weight because $T_1 = F_g$ (the buoyancy of air is negligible). (b) When the crown is immersed in water, the buoyant force \vec{B} changes the scale reading to a lower value $T_2 = F_g - B$.

$$\sum F = B + T_2 - F_g = 0$$

$$B = F_g - T_2$$

$$\rho_c = \frac{m_c}{V_c} = \frac{m_c g}{V_c g} = \frac{m_c g}{(B/\rho_w)} = \frac{m_c g \rho_w}{B} = \frac{m_c g \rho_w}{F_g - T_2}$$

$$\rho_c = \frac{(7.84 \text{ N})(1000 \text{ kg/m}^3)}{7.84 \text{ N} - 6.84 \text{ N}} = 7.84 \times 10^3 \text{ kg/m}^3$$

$$B = \rho_w g V_w = \rho_w g V_c = \rho_w g \left(\frac{m_c}{\rho_c} \right) = \rho_w \left(\frac{m_c g}{\rho_c} \right)$$

$$B = (1.00 \times 10^3 \text{ kg/m}^3) \frac{7.84 \text{ N}}{19.3 \times 10^3 \text{ kg/m}^3} = 0.406 \text{ N}$$

$$T_2 = F_g - B = 7.84 \text{ N} - 0.406 \text{ N} = 7.43 \text{ N}$$

Example 14.6 A Titanic Surprise

An iceberg floating in seawater as shown in Figure 14.12a is extremely dangerous because most of the ice is below the surface. This hidden ice can damage a ship that is still a considerable distance from the visible ice. What fraction of the iceberg lies below the water level?

SOLUTION

Conceptualize You are likely familiar with the phrase, “That’s only the tip of the iceberg.” The origin of this popular saying is that most of the volume of a floating iceberg is beneath the surface of the water (Fig. 14.12b).

Categorize This example corresponds to Case 2 because only part of the iceberg is underneath the water. It is also a simple substitution problem involving Equation 14.6.

Evaluate Equation 14.6 using the densities of ice and seawater (Table 14.1):

$$f = \frac{V_{\text{disp}}}{V_{\text{ice}}} = \frac{\rho_{\text{ice}}}{\rho_{\text{seawater}}} = \frac{917 \text{ kg/m}^3}{1\,030 \text{ kg/m}^3} = 0.890 \text{ or } 89.0\%$$

Therefore, the visible fraction of ice above the water’s surface is about 11%. It is the unseen 89% below the water that represents the danger to a passing ship.



Figure 14.12 (Example 14.6) (a) Much of the volume of this iceberg is beneath the water. (b) A ship can be damaged even when it is not near the visible ice.

14.5 Fluid Dynamics

Thus far, our study of fluids has been restricted to fluids at rest. We now turn our attention to fluids in motion. When fluid is in motion, its flow can be characterized as being one of two main types. The flow is said to be **steady**, or **laminar**, if each particle of the fluid follows a smooth path such that the paths of different particles never cross each other as shown in Figure 14.13. In steady flow, every fluid particle arriving at a given point in space has the same velocity.

Above a certain critical speed, fluid flow becomes **turbulent**. Turbulent flow is irregular flow characterized by small whirlpool-like regions as shown in Figure 14.14.

The term **viscosity** is commonly used in the description of fluid flow to characterize the degree of internal friction in the fluid. This internal friction, or *viscous force*, is associated with the resistance that two adjacent layers of fluid have to moving relative to each other. Viscosity causes part of the fluid’s kinetic energy to be transformed to internal energy. This mechanism is similar to the one by which the kinetic energy of an object sliding over a rough, horizontal surface decreases as discussed in Sections 8.3 and 8.4.

Because the motion of real fluids is very complex and not fully understood, we make some simplifying assumptions in our approach. In our simplification model of **ideal fluid flow**, we make the following four assumptions:

1. **The fluid is nonviscous.** In a nonviscous fluid, internal friction is neglected. An object moving through the fluid experiences no viscous force.
2. **The flow is steady.** In steady (laminar) flow, all particles passing through a point have the same velocity.
3. **The fluid is incompressible.** The density of an incompressible fluid is constant.
4. **The flow is irrotational.** In irrotational flow, the fluid has no angular momentum about any point. If a small paddle wheel placed anywhere in the fluid does not rotate about the wheel’s center of mass, the flow is irrotational.



Figure 14.13 Laminar flow around an automobile in a test wind tunnel.



Figure 14.14 Hot gases from a cigarette made visible by smoke particles. The smoke first moves in laminar flow at the bottom and then in turbulent flow above.

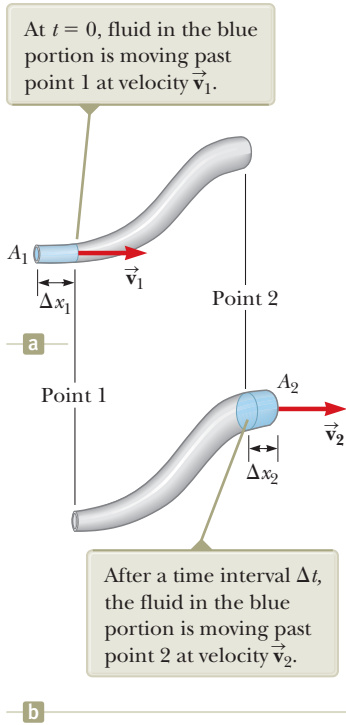


Figure 14.16 A fluid moving with steady flow through a pipe of varying cross-sectional area. (a) At $t = 0$, the small blue-colored portion of the fluid at the left is moving through area A_1 . (b) After a time interval Δt , the blue-colored portion shown here is that fluid that has moved through area A_2 .

Equation of Continuity for Fluids

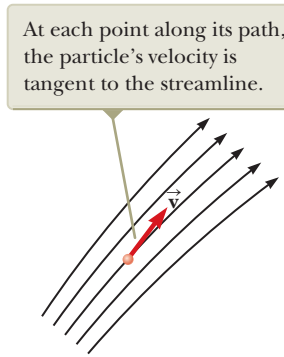


Figure 14.15 A particle in laminar flow follows a streamline.

The path taken by a fluid particle under steady flow is called a **streamline**. The velocity of the particle is always tangent to the streamline as shown in Figure 14.15. A set of streamlines like the ones shown in Figure 14.15 form a *tube of flow*. Fluid particles cannot flow into or out of the sides of this tube; if they could, the streamlines would cross one another.

Consider ideal fluid flow through a pipe of nonuniform size as illustrated in Figure 14.16. Let's focus our attention on a segment of fluid in the pipe. Figure 14.16a shows the segment at time $t = 0$ consisting of the gray portion between point 1 and point 2 and the short blue portion to the left of point 1. At this time, the fluid in the short blue portion is flowing through a cross section of area A_1 at speed v_1 . During the time interval Δt , the small length Δx_1 of fluid in the blue portion moves past point 1. During the same time interval, fluid at the right end of the segment moves past point 2 in the pipe. Figure 14.16b shows the situation at the end of the time interval Δt . The blue portion at the right end represents the fluid that has moved past point 2 through an area A_2 at a speed v_2 .

The mass of fluid contained in the blue portion in Figure 14.16a is given by $m_1 = \rho A_1 \Delta x_1 = \rho A_1 v_1 \Delta t$, where ρ is the (unchanging) density of the ideal fluid. Similarly, the fluid in the blue portion in Figure 14.16b has a mass $m_2 = \rho A_2 \Delta x_2 = \rho A_2 v_2 \Delta t$. Because the fluid is incompressible and the flow is steady, however, the mass of fluid that passes point 1 in a time interval Δt must equal the mass that passes point 2 in the same time interval. That is, $m_1 = m_2$ or $\rho A_1 v_1 \Delta t = \rho A_2 v_2 \Delta t$, which means that

$$A_1 v_1 = A_2 v_2 = \text{constant} \tag{14.7}$$

This expression is called the **equation of continuity for fluids**. It states that the product of the area and the fluid speed at all points along a pipe is constant for an incompressible fluid. Equation 14.7 shows that the speed is high where the tube is constricted (small A) and low where the tube is wide (large A). The product Av , which has the dimensions of volume per unit time, is called either the *volume flux* or the *flow rate*. The condition $Av = \text{constant}$ is equivalent to the statement that the volume of fluid that enters one end of a tube in a given time interval equals the volume leaving the other end of the tube in the same time interval if no leaks are present.

You demonstrate the equation of continuity each time you water your garden with your thumb over the end of a garden hose as in Figure 14.17. By partially block-



© Cengage Learning/George Sample

Figure 14.17 The speed of water spraying from the end of a garden hose increases as the size of the opening is decreased with the thumb.

ing the opening with your thumb, you reduce the cross-sectional area through which the water passes. As a result, the speed of the water increases as it exits the hose, and the water can be sprayed over a long distance.

Example 14.7 Watering a Garden AM

A gardener uses a water hose to fill a 30.0-L bucket. The gardener notes that it takes 1.00 min to fill the bucket. A nozzle with an opening of cross-sectional area 0.500 cm^2 is then attached to the hose. The nozzle is held so that water is projected horizontally from a point 1.00 m above the ground. Over what horizontal distance can the water be projected?

SOLUTION

Conceptualize Imagine any past experience you have with projecting water from a horizontal hose or a pipe using either your thumb or a nozzle, which can be attached to the end of the hose. The faster the water is traveling as it leaves the hose, the farther it will land on the ground from the end of the hose.

Categorize Once the water leaves the hose, it is in free fall. Therefore, we categorize a given element of the water as a projectile. The element is modeled as a *particle under constant acceleration* (due to gravity) in the vertical direction and a *particle under constant velocity* in the horizontal direction. The horizontal distance over which the element is projected depends on the speed with which it is projected. This example involves a change in area for the pipe, so we also categorize it as one in which we use the continuity equation for fluids.

Analyze

Express the volume flow rate R in terms of area and speed of the water in the hose:

$$R = A_1 v_1$$

Solve for the speed of the water in the hose:

$$v_1 = \frac{R}{A_1}$$

We have labeled this speed v_1 because we identify point 1 within the hose. We identify point 2 in the air just outside the nozzle. We must find the speed $v_2 = v_{xi}$ with which the water exits the nozzle. The subscript i anticipates that it will be the *initial* velocity component of the water projected from the hose, and the subscript x indicates that the initial velocity vector of the projected water is horizontal.

Solve the continuity equation for fluids for v_2 :

$$(1) \quad v_2 = v_{xi} = \frac{A_1}{A_2} v_1 = \frac{A_1}{A_2} \left(\frac{R}{A_1} \right) = \frac{R}{A_2}$$

We now shift our thinking away from fluids and to projectile motion. In the vertical direction, an element of the water starts from rest and falls through a vertical distance of 1.00 m.

Write Equation 2.16 for the vertical position of an element of water, modeled as a particle under constant acceleration:

$$y_f = y_i + v_{yi}t - \frac{1}{2}gt^2$$

Call the initial position of the water $y_i = 0$ and recognize that the water begins with a vertical velocity component of zero. Solve for the time at which the water reaches the ground:

$$(2) \quad y_f = 0 + 0 - \frac{1}{2}gt^2 \rightarrow t = \sqrt{\frac{-2y_f}{g}}$$

Use Equation 2.7 to find the horizontal position of the element at this time, modeled as a particle under constant velocity:

$$x_f = x_i + v_{xi}t = 0 + v_2t = v_2t$$

Substitute from Equations (1) and (2):

$$x_f = \frac{R}{A_2} \sqrt{\frac{-2y_f}{g}}$$

Substitute numerical values:

$$x_f = \frac{30.0 \text{ L/min}}{0.500 \text{ cm}^2} \sqrt{\frac{-2(-1.00 \text{ m})}{9.80 \text{ m/s}^2}} \left(\frac{10^3 \text{ cm}^3}{1 \text{ L}} \right) \left(\frac{1 \text{ min}}{60 \text{ s}} \right) = 452 \text{ cm} = 4.52 \text{ m}$$

continued

14.7 continued

Finalize The time interval for the element of water to fall to the ground is unchanged if the projection speed is changed because the projection is horizontal. Increasing the projection speed results in the water hitting the ground farther from the end of the hose, but requires the same time interval to strike the ground.



© iStockphoto.com/ZU_08

Daniel Bernoulli*Swiss physicist (1700–1782)*

Bernoulli made important discoveries in fluid dynamics. Bernoulli's most famous work, *Hydrodynamica*, was published in 1738; it is both a theoretical and a practical study of equilibrium, pressure, and speed in fluids. He showed that as the speed of a fluid increases, its pressure decreases. Referred to as "Bernoulli's principle," Bernoulli's work is used to produce a partial vacuum in chemical laboratories by connecting a vessel to a tube through which water is running rapidly.

14.6 Bernoulli's Equation

You have probably experienced driving on a highway and having a large truck pass you at high speed. In this situation, you may have had the frightening feeling that your car was being pulled in toward the truck as it passed. We will investigate the origin of this effect in this section.

As a fluid moves through a region where its speed or elevation above the Earth's surface changes, the pressure in the fluid varies with these changes. The relationship between fluid speed, pressure, and elevation was first derived in 1738 by Swiss physicist Daniel Bernoulli. Consider the flow of a segment of an ideal fluid through a nonuniform pipe in a time interval Δt as illustrated in Figure 14.18. This figure is very similar to Figure 14.16, which we used to develop the continuity equation. We have added two features: the forces on the outer ends of the blue portions of fluid and the heights of these portions above the reference position $y = 0$.

The force exerted on the segment by the fluid to the left of the blue portion in Figure 14.18a has a magnitude P_1A_1 . The work done by this force on the segment in a time interval Δt is $W_1 = F_1 \Delta x_1 = P_1A_1 \Delta x_1 = P_1V$, where V is the volume of the blue portion of fluid passing point 1 in Figure 14.18a. In a similar manner, the work done on the segment by the fluid to the right of the segment in the same time interval Δt is $W_2 = -P_2A_2 \Delta x_2 = -P_2V$, where V is the volume of the blue portion of fluid passing point 2 in Figure 14.18b. (The volumes of the blue portions of fluid in Figures 14.18a and 14.18b are equal because the fluid is incompressible.) This work is negative because the force on the segment of fluid is to the left and the displacement of the point of application of the force is to the right. Therefore, the net work done on the segment by these forces in the time interval Δt is

$$W = (P_1 - P_2)V$$

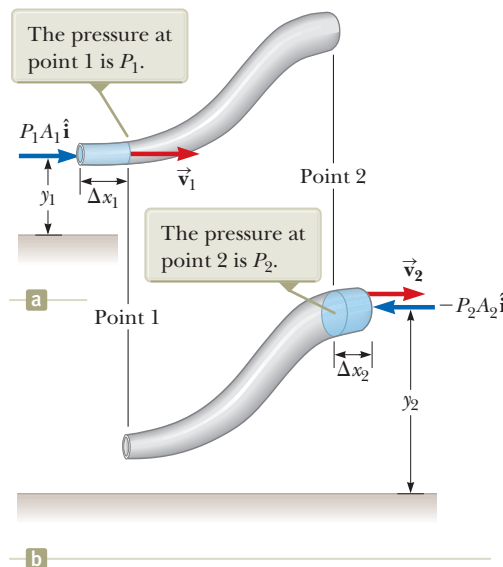


Figure 14.18 A fluid in laminar flow through a pipe. (a) A segment of the fluid at time $t = 0$. A small portion of the blue-colored fluid is at height y_1 above a reference position. (b) After a time interval Δt , the entire segment has moved to the right. The blue-colored portion of the fluid is that which has passed point 2 and is at height y_2 .

Part of this work goes into changing the kinetic energy of the segment of fluid, and part goes into changing the gravitational potential energy of the segment–Earth system. Because we are assuming streamline flow, the kinetic energy K_{gray} of the gray portion of the segment is the same in both parts of Figure 14.18. Therefore, the change in the kinetic energy of the segment of fluid is

$$\Delta K = \left(\frac{1}{2}mv_2^2 + K_{\text{gray}}\right) - \left(\frac{1}{2}mv_1^2 + K_{\text{gray}}\right) = \frac{1}{2}mv_2^2 - \frac{1}{2}mv_1^2$$

where m is the mass of the blue portions of fluid in both parts of Figure 14.18. (Because the volumes of both portions are the same, they also have the same mass.)

Considering the gravitational potential energy of the segment–Earth system, once again there is no change during the time interval for the gravitational potential energy U_{gray} associated with the gray portion of the fluid. Consequently, the change in gravitational potential energy of the system is

$$\Delta U = (mgy_2 + U_{\text{gray}}) - (mgy_1 + U_{\text{gray}}) = mgy_2 - mgy_1$$

From Equation 8.2, the total work done on the system by the fluid outside the segment is equal to the change in mechanical energy of the system: $W = \Delta K + \Delta U$. Substituting for each of these terms gives

$$(P_1 - P_2)V = \frac{1}{2}mv_2^2 - \frac{1}{2}mv_1^2 + mgy_2 - mgy_1$$

If we divide each term by the portion volume V and recall that $\rho = m/V$, this expression reduces to

$$P_1 - P_2 = \frac{1}{2}\rho v_2^2 - \frac{1}{2}\rho v_1^2 + \rho gy_2 - \rho gy_1$$

Rearranging terms gives

$$P_1 + \frac{1}{2}\rho v_1^2 + \rho gy_1 = P_2 + \frac{1}{2}\rho v_2^2 + \rho gy_2 \quad (14.8)$$

which is **Bernoulli's equation** as applied to an ideal fluid. This equation is often expressed as

$$P + \frac{1}{2}\rho v^2 + \rho gy = \text{constant} \quad (14.9)$$

◀ Bernoulli's equation

Bernoulli's equation shows that the pressure of a fluid decreases as the speed of the fluid increases. In addition, the pressure decreases as the elevation increases. This latter point explains why water pressure from faucets on the upper floors of a tall building is weak unless measures are taken to provide higher pressure for these upper floors.

When the fluid is at rest, $v_1 = v_2 = 0$ and Equation 14.8 becomes

$$P_1 - P_2 = \rho g(y_2 - y_1) = \rho gh$$

This result is in agreement with Equation 14.4.

Although Equation 14.9 was derived for an incompressible fluid, the general behavior of pressure with speed is true even for gases: as the speed increases, the pressure decreases. This *Bernoulli effect* explains the experience with the truck on the highway at the opening of this section. As air passes between you and the truck, it must pass through a relatively narrow channel. According to the continuity equation, the speed of the air is higher. According to the Bernoulli effect, this higher-speed air exerts less pressure on your car than the slower-moving air on the other side of your car. Therefore, there is a net force pushing you toward the truck!

- Quick Quiz 14.5** You observe two helium balloons floating next to each other at the ends of strings secured to a table. The facing surfaces of the balloons are separated by 1–2 cm. You blow through the small space between the balloons. What happens to the balloons? (a) They move toward each other. (b) They move away from each other. (c) They are unaffected.

Example 14.8 The Venturi Tube

The horizontal constricted pipe illustrated in Figure 14.19, known as a *Venturi tube*, can be used to measure the flow speed of an incompressible fluid. Determine the flow speed at point 2 of Figure 14.19a if the pressure difference $P_1 - P_2$ is known.

SOLUTION

Conceptualize Bernoulli's equation shows how the pressure of an ideal fluid decreases as its speed increases. Therefore, we should be able to calibrate a device to give us the fluid speed if we can measure pressure.

Categorize Because the problem states that the fluid is incompressible, we can categorize it as one in which we can use the equation of continuity for fluids and Bernoulli's equation.

Analyze Apply Equation 14.8 to points 1 and 2, noting that $y_1 = y_2$ because the pipe is horizontal:

Solve the equation of continuity for v_1 :

$$v_1 = \frac{A_2}{A_1} v_2$$

Substitute this expression into Equation (1):

$$P_1 + \frac{1}{2}\rho\left(\frac{A_2}{A_1}\right)^2 v_2^2 = P_2 + \frac{1}{2}\rho v_2^2$$

Solve for v_2 :

$$v_2 = A_1 \sqrt{\frac{2(P_1 - P_2)}{\rho(A_1^2 - A_2^2)}}$$

Finalize From the design of the tube (areas A_1 and A_2) and measurements of the pressure difference $P_1 - P_2$, we can calculate the speed of the fluid with this equation. To see the relationship between fluid speed and pressure difference, place two empty soda cans on their sides about 2 cm apart on a table. Gently blow a stream of air horizontally between the cans and watch them roll together slowly due to a modest pressure difference between the stagnant air on their outside edges and the moving air between them. Now blow more strongly and watch the increased pressure difference move the cans together more rapidly.

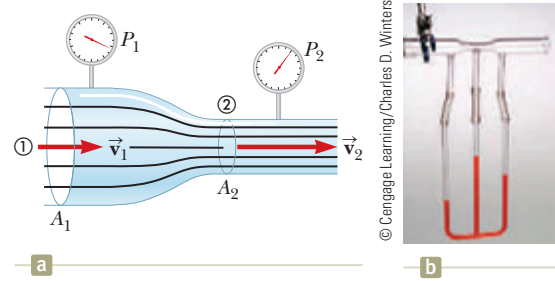


Figure 14.19 (Example 14.8) (a) Pressure P_1 is greater than pressure P_2 because $v_1 < v_2$. This device can be used to measure the speed of fluid flow. (b) A Venturi tube, located at the top of the photograph. The higher level of fluid in the middle column shows that the pressure at the top of the column, which is in the constricted region of the Venturi tube, is lower.

Example 14.9 Torricelli's Law AM

An enclosed tank containing a liquid of density ρ has a hole in its side at a distance y_1 from the tank's bottom (Fig. 14.20). The hole is open to the atmosphere, and its diameter is much smaller than the diameter of the tank. The air above the liquid is maintained at a pressure P . Determine the speed of the liquid as it leaves the hole when the liquid's level is a distance h above the hole.

SOLUTION

Conceptualize Imagine that the tank is a fire extinguisher. When the hole is opened, liquid leaves the hole with a certain speed. If the pressure P at the top of the liquid is increased, the liquid leaves with a higher speed. If the pressure P falls too low, the liquid leaves with a low speed and the extinguisher must be replaced.

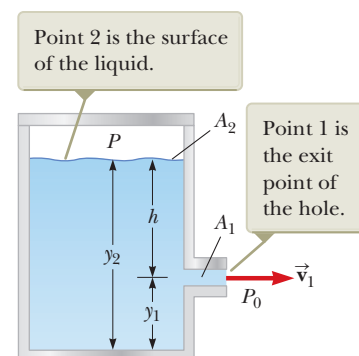


Figure 14.20 (Example 14.9) A liquid leaves a hole in a tank at speed v_1 .

14.9 continued

Categorize Looking at Figure 14.20, we know the pressure at two points and the velocity at one of those points. We wish to find the velocity at the second point. Therefore, we can categorize this example as one in which we can apply Bernoulli's equation.

Analyze Because $A_2 \gg A_1$, the liquid is approximately at rest at the top of the tank, where the pressure is P . At the hole, P_1 is equal to atmospheric pressure P_0 .

Apply Bernoulli's equation between points 1 and 2:

$$P_0 + \frac{1}{2}\rho v_1^2 + \rho g y_1 = P + \rho g y_2$$

Solve for v_1 , noting that $y_2 - y_1 = h$:

$$v_1 = \sqrt{\frac{2(P - P_0)}{\rho} + 2gh}$$

Finalize When P is much greater than P_0 (so that the term $2gh$ can be neglected), the exit speed of the water is mainly a function of P . If the tank is open to the atmosphere, then $P = P_0$ and $v_1 = \sqrt{2gh}$. In other words, for an open tank, the speed of the liquid leaving a hole a distance h below the surface is equal to that acquired by an object falling freely through a vertical distance h . This phenomenon is known as *Torricelli's law*.

WHAT IF? What if the position of the hole in Figure 14.20 could be adjusted vertically? If the tank is open to the atmosphere and sitting on a table, what position of the hole would cause the water to land on the table at the farthest distance from the tank?

Answer Model a parcel of water exiting the hole as a projectile. From the *particle under constant acceleration* model, find the time at which the parcel strikes the table from a hole at an arbitrary position y_1 :

$$y_f = y_i + v_{y,i}t - \frac{1}{2}gt^2$$

$$0 = y_1 + 0 - \frac{1}{2}gt^2$$

$$t = \sqrt{\frac{2y_1}{g}}$$

From the *particle under constant velocity* model, find the horizontal position of the parcel at the time it strikes the table:

$$\begin{aligned} x_f &= x_i + v_{x,i}t = 0 + \sqrt{2g(y_2 - y_1)} \sqrt{\frac{2y_1}{g}} \\ &= 2\sqrt{(y_2 y_1 - y_1^2)} \end{aligned}$$

Maximize the horizontal position by taking the derivative of x_f with respect to y_1 (because y_1 , the height of the hole, is the variable that can be adjusted) and setting it equal to zero:

$$\frac{dx_f}{dy_1} = \frac{1}{2}(2)(y_2 y_1 - y_1^2)^{-1/2}(y_2 - 2y_1) = 0$$

Solve for y_1 :

$$y_1 = \frac{1}{2}y_2$$

Therefore, to maximize the horizontal distance, the hole should be halfway between the bottom of the tank and the upper surface of the water. Below this location, the water is projected at a higher speed but falls for a short time interval, reducing the horizontal range. Above this point, the water is in the air for a longer time interval but is projected with a smaller horizontal speed.

14.7 Other Applications of Fluid Dynamics

Consider the streamlines that flow around an airplane wing as shown in Figure 14.21 on page 434. Let's assume the airstream approaches the wing horizontally from the right with a velocity \vec{v}_1 . The tilt of the wing causes the airstream to be deflected downward with a velocity \vec{v}_2 . Because the airstream is deflected by the wing, the wing must exert a force on the airstream. According to Newton's third law, the airstream exerts a force \vec{F} on the wing that is equal in magnitude and

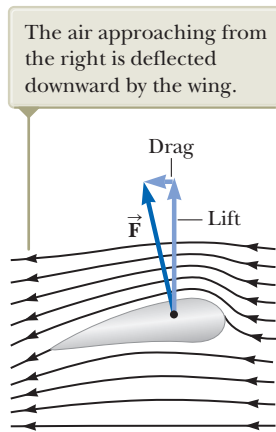


Figure 14.21 Streamline flow around a moving airplane wing. By Newton's third law, the air deflected by the wing results in an upward force on the wing from the air: *lift*. Because of air resistance, there is also a force opposite the velocity of the wing: *drag*.

opposite in direction. This force has a vertical component called **lift** (or aerodynamic lift) and a horizontal component called **drag**. The lift depends on several factors, such as the speed of the airplane, the area of the wing, the wing's curvature, and the angle between the wing and the horizontal. The curvature of the wing surfaces causes the pressure above the wing to be lower than that below the wing due to the Bernoulli effect. This pressure difference assists with the lift on the wing. As the angle between the wing and the horizontal increases, turbulent flow can set in above the wing to reduce the lift.

In general, an object moving through a fluid experiences lift as the result of any effect that causes the fluid to change its direction as it flows past the object. Some factors that influence lift are the shape of the object, its orientation with respect to the fluid flow, any spinning motion it might have, and the texture of its surface. For example, a golf ball struck with a club is given a rapid backspin due to the slant of the club. The dimples on the ball increase the friction force between the ball and the air so that air adheres to the ball's surface. Figure 14.22 shows air adhering to the ball and being deflected downward as a result. Because the ball pushes the air down, the air must push up on the ball. Without the dimples, the friction force is lower and the golf ball does not travel as far. It may seem counterintuitive to increase the range by increasing the friction force, but the lift gained by spinning the ball more than compensates for the loss of range due to the effect of friction on the translational motion of the ball. For the same reason, a baseball's cover helps the spinning ball "grab" the air rushing by and helps deflect it when a "curve ball" is thrown.

A number of devices operate by means of the pressure differentials that result from differences in a fluid's speed. For example, a stream of air passing over one end of an open tube, the other end of which is immersed in a liquid, reduces the pressure above the tube as illustrated in Figure 14.23. This reduction in pressure causes the liquid to rise into the airstream. The liquid is then dispersed into a fine spray of droplets. You might recognize that this *atomizer* is used in perfume bottles and paint sprayers.

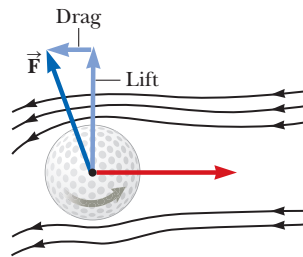


Figure 14.22 Because of the deflection of air, a spinning golf ball experiences a lifting force that allows it to travel much farther than it would if it were not spinning.

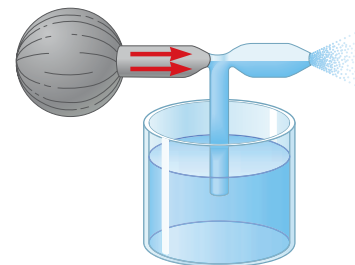


Figure 14.23 A stream of air passing over a tube dipped into a liquid causes the liquid to rise in the tube.

Summary

Definitions

The **pressure** P in a fluid is the force per unit area exerted by the fluid on a surface:

$$P \equiv \frac{F}{A} \quad (14.1)$$

In the SI system, pressure has units of newtons per square meter (N/m^2), and $1 \text{ N}/\text{m}^2 = 1$ **pascal** (Pa).

Concepts and Principles

- The pressure in a fluid at rest varies with depth h in the fluid according to the expression

$$P = P_0 + \rho gh \quad (14.4)$$

where P_0 is the pressure at $h = 0$ and ρ is the density of the fluid, assumed uniform.

Pascal's law states that when pressure is applied to an enclosed fluid, the pressure is transmitted undiminished to every point in the fluid and to every point on the walls of the container.

- The flow rate (volume flux) through a pipe that varies in cross-sectional area is constant; that is equivalent to stating that the product of the cross-sectional area A and the speed v at any point is a constant. This result is expressed in the **equation of continuity for fluids**:

$$A_1 v_1 = A_2 v_2 = \text{constant} \quad (14.7)$$

- When an object is partially or fully submerged in a fluid, the fluid exerts on the object an upward force called the **buoyant force**. According to **Archimedes's principle**, the magnitude of the buoyant force is equal to the weight of the fluid displaced by the object:

$$B = \rho_{\text{fluid}} g V_{\text{disp}} \quad (14.5)$$

- The sum of the pressure, kinetic energy per unit volume, and gravitational potential energy per unit volume has the same value at all points along a streamline for an ideal fluid. This result is summarized in **Bernoulli's equation**:

$$P + \frac{1}{2}\rho v^2 + \rho gy = \text{constant} \quad (14.9)$$

Objective Questions

1. denotes answer available in *Student Solutions Manual/Study Guide*

- Figure OQ14.1 shows aerial views from directly above two dams. Both dams are equally wide (the vertical dimension in the diagram) and equally high (into the page in the diagram). The dam on the left holds back a very large lake, and the dam on the right holds back a narrow river. Which dam has to be built more strongly? (a) the dam on the left (b) the dam on the right (c) both the same (d) cannot be predicted

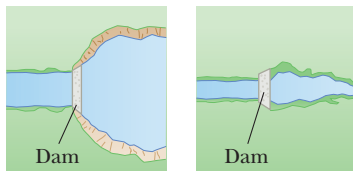


Figure OQ14.1

- A beach ball filled with air is pushed about 1 m below the surface of a swimming pool and released from rest. Which of the following statements are valid, assuming the size of the ball remains the same? (Choose all correct statements.) (a) As the ball rises in the pool, the buoyant force on it increases. (b) When the ball is released, the buoyant force exceeds the gravitational force, and the ball accelerates upward. (c) The buoyant force on the ball decreases as the ball approaches the surface of the pool. (d) The buoyant force on the ball equals its weight and remains constant as the ball rises. (e) The buoyant force on the ball while it is submerged is approximately equal to the weight of a volume of water that could fill the ball.
- A wooden block floats in water, and a steel object is attached to the bottom of the block by a string as in Figure OQ14.3. If the block remains floating, which

of the following statements are valid? (Choose all correct statements.) (a) The buoyant force on the steel object is equal to its weight. (b) The buoyant force on the block is equal to its weight. (c) The tension in the string is equal to the weight of the steel object. (d) The tension in the string is less than the weight of the steel object. (e) The buoyant force on the block is equal to the volume of water it displaces.

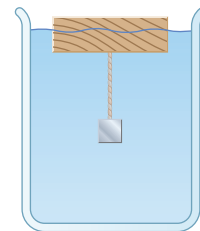


Figure OQ14.3

- An apple is held completely submerged just below the surface of water in a container. The apple is then moved to a deeper point in the water. Compared with the force needed to hold the apple just below the surface, what is the force needed to hold it at the deeper point? (a) larger (b) the same (c) smaller (d) impossible to determine
- A beach ball is made of thin plastic. It has been inflated with air, but the plastic is not stretched. By swimming with fins on, you manage to take the ball from the surface of a pool to the bottom. Once the ball is completely submerged, what happens to the buoyant force exerted on the beach ball as you take it deeper? (a) It increases. (b) It remains constant. (c) It decreases. (d) It is impossible to determine.

6. A solid iron sphere and a solid lead sphere of the same size are each suspended by strings and are submerged in a tank of water. (Note that the density of lead is greater than that of iron.) Which of the following statements are valid? (Choose all correct statements.) (a) The buoyant force on each is the same. (b) The buoyant force on the lead sphere is greater than the buoyant force on the iron sphere because lead has the greater density. (c) The tension in the string supporting the lead sphere is greater than the tension in the string supporting the iron sphere. (d) The buoyant force on the iron sphere is greater than the buoyant force on the lead sphere because lead displaces more water. (e) None of those statements is true.
7. Three vessels of different shapes are filled to the same level with water as in Figure OQ14.7. The area of the base is the same for all three vessels. Which of the following statements are valid? (Choose all correct statements.) (a) The pressure at the top surface of vessel A is greatest because it has the largest surface area. (b) The pressure at the bottom of vessel A is greatest because it contains the most water. (c) The pressure at the bottom of each vessel is the same. (d) The force on the bottom of each vessel is not the same. (e) At a given depth below the surface of each vessel, the pressure on the side of vessel A is greatest because of its slope.

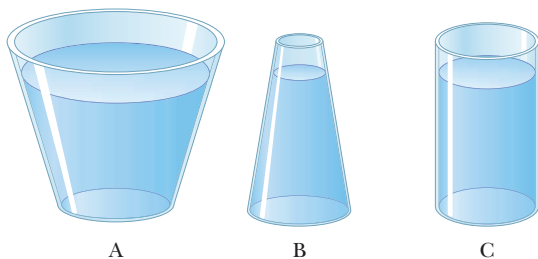


Figure OQ14.7

8. One of the predicted problems due to global warming is that ice in the polar ice caps will melt and raise sea levels everywhere in the world. Is that more of a worry for ice (a) at the north pole, where most of the ice floats on water; (b) at the south pole, where most of the ice sits on land; (c) both at the north and south pole equally; or (d) at neither pole?
9. A boat develops a leak and, after its passengers are rescued, eventually sinks to the bottom of a lake. When the boat is at the bottom, what is the force of the lake bottom on the boat? (a) greater than the weight of the boat (b) equal to the weight of the boat (c) less than

the weight of the boat (d) equal to the weight of the displaced water (e) equal to the buoyant force on the boat

10. A small piece of steel is tied to a block of wood. When the wood is placed in a tub of water with the steel on top, half of the block is submerged. Now the block is inverted so that the steel is under water. (i) Does the amount of the block submerged (a) increase, (b) decrease, or (c) remain the same? (ii) What happens to the water level in the tub when the block is inverted? (a) It rises. (b) It falls. (c) It remains the same.
11. A piece of unpainted porous wood barely floats in an open container partly filled with water. The container is then sealed and pressurized above atmospheric pressure. What happens to the wood? (a) It rises in the water. (b) It sinks lower in the water. (c) It remains at the same level.
12. A person in a boat floating in a small pond throws an anchor overboard. What happens to the level of the pond? (a) It rises. (b) It falls. (c) It remains the same.
13. Rank the buoyant forces exerted on the following five objects of equal volume from the largest to the smallest. Assume the objects have been dropped into a swimming pool and allowed to come to mechanical equilibrium. If any buoyant forces are equal, state that in your ranking. (a) a block of solid oak (b) an aluminum block (c) a beach ball made of thin plastic and inflated with air (d) an iron block (e) a thin-walled, sealed bottle of water
14. A water supply maintains a constant rate of flow for water in a hose. You want to change the opening of the nozzle so that water leaving the nozzle will reach a height that is four times the current maximum height the water reaches with the nozzle vertical. To do so, should you (a) decrease the area of the opening by a factor of 16, (b) decrease the area by a factor of 8, (c) decrease the area by a factor of 4, (d) decrease the area by a factor of 2, or (e) give up because it cannot be done?
15. A glass of water contains floating ice cubes. When the ice melts, does the water level in the glass (a) go up, (b) go down, or (c) remain the same?
16. An ideal fluid flows through a horizontal pipe whose diameter varies along its length. Measurements would indicate that the sum of the kinetic energy per unit volume and pressure at different sections of the pipe would (a) decrease as the pipe diameter increases, (b) increase as the pipe diameter increases, (c) increase as the pipe diameter decreases, (d) decrease as the pipe diameter decreases, or (e) remain the same as the pipe diameter changes.

Conceptual Questions

1. denotes answer available in *Student Solutions Manual/Study Guide*

1. When an object is immersed in a liquid at rest, why is the net force on the object in the horizontal direction equal to zero?
2. Two thin-walled drinking glasses having equal base areas but different shapes, with very different cross-sectional areas above the base, are filled to the same

level with water. According to the expression $P = P_0 + \rho gh$, the pressure is the same at the bottom of both glasses. In view of this equality, why does one weigh more than the other?

3. Because atmospheric pressure is about 10^5 N/m^2 and the area of a person's chest is about 0.13 m^2 , the force of the

atmosphere on one's chest is around 13 000 N. In view of this enormous force, why don't our bodies collapse?

4. A fish rests on the bottom of a bucket of water while the bucket is being weighed on a scale. When the fish begins to swim around, does the scale reading change? Explain your answer.
5. You are a passenger on a spacecraft. For your survival and comfort, the interior contains air just like that at the surface of the Earth. The craft is coasting through a very empty region of space. That is, a nearly perfect vacuum exists just outside the wall. Suddenly, a meteoroid pokes a hole, about the size of a large coin, right through the wall next to your seat. (a) What happens? (b) Is there anything you can or should do about it?
6. If the airstream from a hair dryer is directed over a table-tennis ball, the ball can be levitated. Explain.
7. A water tower is a common sight in many communities. Figure CQ14.7 shows a collection of colorful water towers in Kuwait City, Kuwait. Notice that the large weight of the water results in the center of mass of the system being high above the ground. Why is it desirable for a water tower to have this highly unstable shape rather than being shaped as a tall cylinder?



Figure CQ14.7

8. If you release a ball while inside a freely falling elevator, the ball remains in front of you rather than falling to the floor because the ball, the elevator, and you all experience the same downward gravitational acceleration. What happens if you repeat this experiment with a helium-filled balloon?
9. (a) Is the buoyant force a conservative force? (b) Is a potential energy associated with the buoyant force? (c) Explain your answers to parts (a) and (b).
10. An empty metal soap dish barely floats in water. A bar of Ivory soap floats in water. When the soap is stuck in the soap dish, the combination sinks. Explain why.
11. How would you determine the density of an irregularly shaped rock?
12. Place two cans of soft drinks, one regular and one diet, in a container of water. You will find that the diet drink floats while the regular one sinks. Use Archimedes's principle to devise an explanation.
13. The water supply for a city is often provided from reservoirs built on high ground. Water flows from the reservoir, through pipes, and into your home when you turn the tap on your faucet. Why does water flow more rapidly out of a faucet on the first floor of a building than in an apartment on a higher floor?

14. Does a ship float higher in the water of an inland lake or in the ocean? Why?
15. When ski jumpers are airborne (Fig. CQ14.15), they bend their bodies forward and keep their hands at their sides. Why?



Figure CQ14.15

16. Why do airplane pilots prefer to take off with the airplane facing into the wind?
17. Prairie dogs ventilate their burrows by building a mound around one entrance, which is open to a stream of air when wind blows from any direction. A second entrance at ground level is open to almost stagnant air. How does this construction create an airflow through the burrow?
18. In Figure CQ14.18, an airstream moves from right to left through a tube that is constricted at the middle. Three table-tennis balls are levitated in equilibrium above the vertical columns through which the air escapes. (a) Why is the ball at the right higher than the one in the middle? (b) Why is the ball at the left lower than the ball at the right even though the horizontal tube has the same dimensions at these two points?




Figure CQ14.18

19. A typical silo on a farm has many metal bands wrapped around its perimeter for support as shown in Figure CQ14.19. Why is the spacing between successive bands smaller for the lower portions of the silo on the left, and why are double bands used at lower portions of the silo on the right?



Figure CQ14.19

Problems

WebAssign

The problems found in this chapter may be assigned online in Enhanced WebAssign

1. straightforward; 2. intermediate; 3. challenging

1. full solution available in the *Student Solutions Manual/Study Guide*

AMT Analysis Model tutorial available in Enhanced WebAssign

GP Guided Problem

M Master It tutorial available in Enhanced WebAssign

W Watch It video solution available in Enhanced WebAssign

Note: In all problems, assume the density of air is the 20°C value from Table 14.1, 1.20 kg/m^3 , unless noted otherwise.

Section 14.1 Pressure

- A large man sits on a four-legged chair with his feet off the floor. The combined mass of the man and chair is 95.0 kg. If the chair legs are circular and have a radius of 0.500 cm at the bottom, what pressure does each leg exert on the floor?
- The nucleus of an atom can be modeled as several protons and neutrons closely packed together. Each particle has a mass of $1.67 \times 10^{-27} \text{ kg}$ and radius on the order of 10^{-15} m . (a) Use this model and the data provided to estimate the density of the nucleus of an atom. (b) Compare your result with the density of a material such as iron. What do your result and comparison suggest concerning the structure of matter?
- W** A 50.0-kg woman wearing high-heeled shoes is invited into a home in which the kitchen has vinyl floor covering. The heel on each shoe is circular and has a radius of 0.500 cm. (a) If the woman balances on one heel, what pressure does she exert on the floor? (b) Should the homeowner be concerned? Explain your answer.
- Estimate the total mass of the Earth's atmosphere. (The radius of the Earth is $6.37 \times 10^6 \text{ m}$, and atmospheric pressure at the surface is $1.013 \times 10^5 \text{ Pa}$.)
- M** Calculate the mass of a solid gold rectangular bar that has dimensions of $4.50 \text{ cm} \times 11.0 \text{ cm} \times 26.0 \text{ cm}$.

Section 14.2 Variation of Pressure with Depth

- (a) A very powerful vacuum cleaner has a hose 2.86 cm in diameter. With the end of the hose placed perpendicularly on the flat face of a brick, what is the weight of the heaviest brick that the cleaner can lift? (b) **What If?** An octopus uses one sucker of diameter 2.86 cm on each of the two shells of a clam in an attempt to pull the shells apart. Find the greatest force the octopus can exert on a clamshell in salt water 32.3 m deep.
- M** The spring of the pressure gauge shown in Figure P14.7 has a force constant of 1 250 N/m, and the piston has a diameter of 1.20 cm. As the gauge is lowered into water in a lake, what change in depth causes the piston to move in by 0.750 cm?

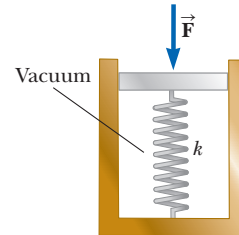


Figure P14.7

- W** The small piston of a hydraulic lift (Fig. P14.8) has a cross-sectional area of 3.00 cm^2 , and its large piston has a cross-sectional area of 200 cm^2 . What downward force of magnitude F_1 must be applied to the small piston for the lift to raise a load whose weight is $F_g = 15.0 \text{ kN}$?

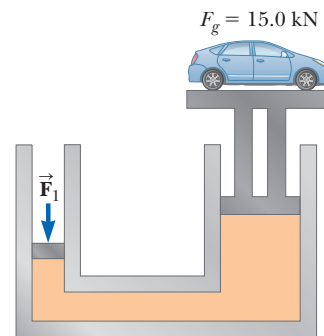


Figure P14.8

- AMT** **M** What must be the contact area between a suction cup (completely evacuated) and a ceiling if the cup is to support the weight of an 80.0-kg student?
- A swimming pool has dimensions $30.0 \text{ m} \times 10.0 \text{ m}$ and a flat bottom. When the pool is filled to a depth of 2.00 m with fresh water, what is the force exerted by the water on (a) the bottom? (b) On each end? (c) On each side?
- (a) Calculate the absolute pressure at the bottom of a freshwater lake at a point whose depth is 27.5 m. Assume the density of the water is $1.00 \times 10^3 \text{ kg/m}^3$ and that the air above is at a pressure of 101.3 kPa. (b) What force is exerted by the water on the window of an underwater vehicle at this depth if the window is circular and has a diameter of 35.0 cm?
- Why is the following situation impossible? Figure P14.12 shows Superman attempting to drink cold water

through a straw of length $\ell = 12.0$ m. The walls of the tubular straw are very strong and do not collapse. With his great strength, he achieves maximum possible suction and enjoys drinking the cold water.

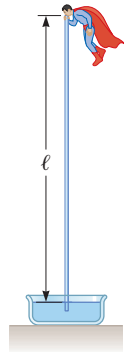


Figure P14.12

13. For the cellar of a new house, a hole is dug in the ground, with vertical sides going down 2.40 m. A concrete foundation wall is built all the way across the 9.60-m width of the excavation. This foundation wall is 0.183 m away from the front of the cellar hole. During a rainstorm, drainage from the street fills up the space in front of the concrete wall, but not the cellar behind the wall. The water does not soak into the clay soil. Find the force the water causes on the foundation wall. For comparison, the weight of the water is given by $2.40 \text{ m} \times 9.60 \text{ m} \times 0.183 \text{ m} \times 1000 \text{ kg/m}^3 \times 9.80 \text{ m/s}^2 = 41.3 \text{ kN}$.
14. A container is filled to a depth of 20.0 cm with water. On top of the water floats a 30.0-cm-thick layer of oil with specific gravity 0.700. What is the absolute pressure at the bottom of the container?
15. **Review.** The tank in Figure P14.15 is filled with water of depth $d = 2.00$ m. At the bottom of one sidewall is a rectangular hatch of height $h = 1.00$ m and width $w = 2.00$ m that is hinged at the top of the hatch. (a) Determine the magnitude of the force the water exerts on the hatch. (b) Find the magnitude of the torque exerted by the water about the hinges.

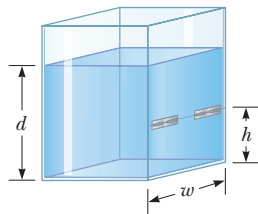


Figure P14.15

Problems 15 and 16.

16. **Review.** The tank in Figure P14.15 is filled with water of depth d . At the bottom of one sidewall is a rectangular hatch of height h and width w that is hinged at the top of the hatch. (a) Determine the magnitude of the force the water exerts on the hatch. (b) Find the magnitude of the torque exerted by the water about the hinges.

17. **Review.** Piston ① in Figure P14.17 has a diameter of 0.250 in. Piston ② has a diameter of 1.50 in. Determine the magnitude F of the force necessary to support the 500-lb load in the absence of friction.

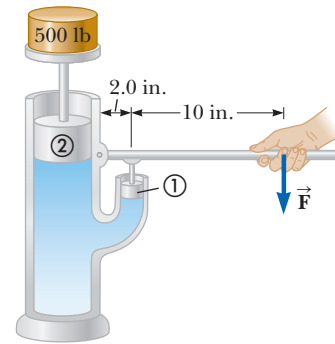


Figure P14.17

18. **Review.** A solid sphere of brass (bulk modulus of $14.0 \times 10^{10} \text{ N/m}^2$) with a diameter of 3.00 m is thrown into the ocean. By how much does the diameter of the sphere decrease as it sinks to a depth of 1.00 km?

Section 14.3 Pressure Measurements

19. Normal atmospheric pressure is $1.013 \times 10^5 \text{ Pa}$. The approach of a storm causes the height of a mercury barometer to drop by 20.0 mm from the normal height. What is the atmospheric pressure?
20. The human brain and spinal cord are immersed in the cerebrospinal fluid. The fluid is normally continuous between the cranial and spinal cavities and exerts a pressure of 100 to 200 mm of H_2O above the prevailing atmospheric pressure. In medical work, pressures are often measured in units of millimeters of H_2O because body fluids, including the cerebrospinal fluid, typically have the same density as water. The pressure of the cerebrospinal fluid can be measured by means of a *spinal tap* as illustrated in Figure P14.20. A hollow tube is inserted into the spinal column, and the height to which the fluid rises is observed. If the fluid rises to a height of 160 mm, we write its gauge pressure as 160 mm H_2O . (a) Express this pressure in pascals, in atmospheres, and in millimeters of mercury. (b) Some conditions that block or inhibit the flow of cerebrospinal fluid can be investigated by means of *Queckenstedt's test*. In this procedure, the veins in the patient's neck are compressed to make the blood pressure rise in the brain, which in turn should be transmitted to the cerebrospinal fluid. Explain how the level of fluid in the spinal tap can be used as a diagnostic tool for the condition of the patient's spine.

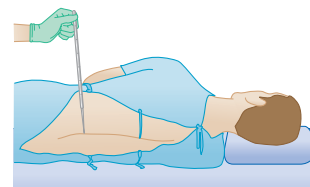


Figure P14.20

- 21.** Blaise Pascal duplicated Torricelli's barometer using a red Bordeaux wine, of density 984 kg/m^3 , as the working liquid (Fig. P14.21). (a) What was the height h of the wine column for normal atmospheric pressure? (b) Would you expect the vacuum above the column to be as good as for mercury?

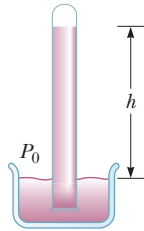


Figure P14.21

- 22.** Mercury is poured into a U-tube as shown in Figure **W** P14.22a. The left arm of the tube has cross-sectional area A_1 of 10.0 cm^2 , and the right arm has a cross-sectional area A_2 of 5.00 cm^2 . One hundred grams of water are then poured into the right arm as shown in Figure P14.22b. (a) Determine the length of the water column in the right arm of the U-tube. (b) Given that the density of mercury is 13.6 g/cm^3 , what distance h does the mercury rise in the left arm?

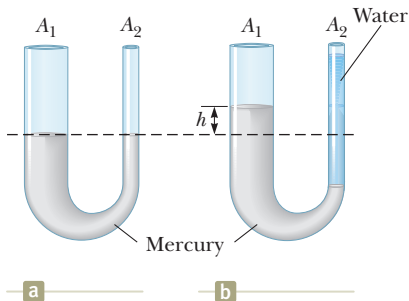


Figure P14.22

- 23.** A backyard swimming pool with a circular base of diameter 6.00 m is filled to depth 1.50 m . (a) Find the absolute pressure at the bottom of the pool. (b) Two persons with combined mass 150 kg enter the pool and float quietly there. No water overflows. Find the pressure increase at the bottom of the pool after they enter the pool and float.
- 24.** A tank with a flat bottom of area A and vertical sides is filled to a depth h with water. The pressure is P_0 at the top surface. (a) What is the absolute pressure at the bottom of the tank? (b) Suppose an object of mass M and density less than the density of water is placed into the tank and floats. No water overflows. What is the resulting increase in pressure at the bottom of the tank?

Section 14.4 Buoyant Forces and Archimedes's Principle

- 25.** A table-tennis ball has a diameter of 3.80 cm and average density of 0.0840 g/cm^3 . What force is required to hold it completely submerged under water?
- 26.** The gravitational force exerted on a solid object is 5.00 N . When the object is suspended from a spring

scale and submerged in water, the scale reads 3.50 N (Fig. P14.26). Find the density of the object.

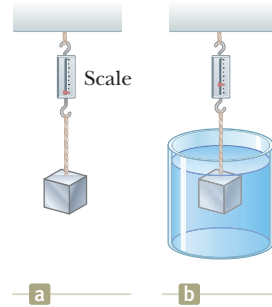


Figure P14.26 Problems 26 and 27.

- 27.** A 10.0-kg block of metal measuring 12.0 cm by 10.0 cm by 10.0 cm is suspended from a scale and immersed in water as shown in Figure P14.26b. The 12.0-cm dimension is vertical, and the top of the block is 5.00 cm below the surface of the water. (a) What are the magnitudes of the forces acting on the top and on the bottom of the block due to the surrounding water? (b) What is the reading of the spring scale? (c) Show that the buoyant force equals the difference between the forces at the top and bottom of the block.
- 28.** A light balloon is filled with 400 m^3 of helium at atmospheric pressure. (a) At 0°C , the balloon can lift a payload of what mass? (b) **What If?** In Table 14.1, observe that the density of hydrogen is nearly half the density of helium. What load can the balloon lift if filled with hydrogen?
- 29.** A cube of wood having an edge dimension of 20.0 cm and a density of 650 kg/m^3 floats on water. (a) What is the distance from the horizontal top surface of the cube to the water level? (b) What mass of lead should be placed on the cube so that the top of the cube will be just level with the water surface?
- 30.** The United States possesses the ten largest warships in the world, aircraft carriers of the *Nimitz* class. Suppose one of the ships bobs up to float 11.0 cm higher in the ocean water when 50 fighters take off from it in a time interval of 25 min , at a location where the free-fall acceleration is 9.78 m/s^2 . The planes have an average laden mass of $29\,000 \text{ kg}$. Find the horizontal area enclosed by the waterline of the ship.
- 31.** A plastic sphere floats in water with 50.0% of its volume submerged. This same sphere floats in glycerin with 40.0% of its volume submerged. Determine the densities of (a) the glycerin and (b) the sphere.
- 32.** A spherical vessel used for deep-sea exploration has a radius of 1.50 m and a mass of $1.20 \times 10^4 \text{ kg}$. To dive, the vessel takes on mass in the form of seawater. Determine the mass the vessel must take on if it is to descend at a constant speed of 1.20 m/s , when the resistive force on it is $1\,100 \text{ N}$ in the upward direction. The density of seawater is equal to $1.03 \times 10^3 \text{ kg/m}^3$.
- 33.** A wooden block of volume $5.24 \times 10^{-4} \text{ m}^3$ floats in water, and a small steel object of mass m is placed on top of the block. When $m = 0.310 \text{ kg}$, the system is in

- equilibrium and the top of the wooden block is at the level of the water. (a) What is the density of the wood? (b) What happens to the block when the steel object is replaced by an object whose mass is less than 0.310 kg? (c) What happens to the block when the steel object is replaced by an object whose mass is greater than 0.310 kg?
34. The weight of a rectangular block of low-density material is 15.0 N. With a thin string, the center of the horizontal bottom face of the block is tied to the bottom of a beaker partly filled with water. When 25.0% of the block's volume is submerged, the tension in the string is 10.0 N. (a) Find the buoyant force on the block. (b) Oil of density 800 kg/m^3 is now steadily added to the beaker, forming a layer above the water and surrounding the block. The oil exerts forces on each of the four sidewalls of the block that the oil touches. What are the directions of these forces? (c) What happens to the string tension as the oil is added? Explain how the oil has this effect on the string tension. (d) The string breaks when its tension reaches 60.0 N. At this moment, 25.0% of the block's volume is still below the water line. What additional fraction of the block's volume is below the top surface of the oil?
35. A large weather balloon whose mass is 226 kg is filled with helium gas until its volume is 325 m^3 . Assume the density of air is 1.20 kg/m^3 and the density of helium is 0.179 kg/m^3 . (a) Calculate the buoyant force acting on the balloon. (b) Find the net force on the balloon and determine whether the balloon will rise or fall after it is released. (c) What additional mass can the balloon support in equilibrium?
36. A *hydrometer* is an instrument used to determine liquid density. A simple one is sketched in Figure P14.36. The bulb of a syringe is squeezed and released to let the atmosphere lift a sample of the liquid of interest into a tube containing a calibrated rod of known density. The rod, of length L and average density ρ_0 , floats partially immersed in the liquid of density ρ . A length h of the rod protrudes above the surface of the liquid. Show that the density of the liquid is given by

$$\rho = \frac{\rho_0 L}{L - h}$$

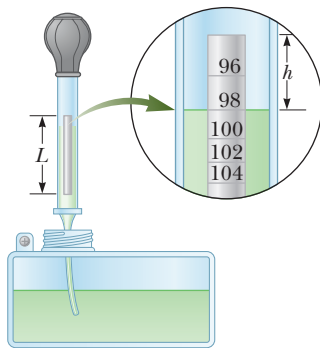


Figure P14.36 Problems 36 and 37.

37. Refer to Problem 36 and Figure P14.36. A hydrometer is to be constructed with a cylindrical floating rod. Nine

fiduciary marks are to be placed along the rod to indicate densities of 0.98 g/cm^3 , 1.00 g/cm^3 , 1.02 g/cm^3 , 1.04 g/cm^3 , \dots , 1.14 g/cm^3 . The row of marks is to start 0.200 cm from the top end of the rod and end 1.80 cm from the top end. (a) What is the required length of the rod? (b) What must be its average density? (c) Should the marks be equally spaced? Explain your answer.

38. On October 21, 2001, Ian Ashpole of the United Kingdom achieved a record altitude of 3.35 km (11 000 ft) powered by 600 toy balloons filled with helium. Each filled balloon had a radius of about 0.50 m and an estimated mass of 0.30 kg. (a) Estimate the total buoyant force on the 600 balloons. (b) Estimate the net upward force on all 600 balloons. (c) Ashpole parachuted to the Earth after the balloons began to burst at the high altitude and the buoyant force decreased. Why did the balloons burst?

39. How many cubic meters of helium are required to lift a light balloon with a 400-kg payload to a height of 8 000 m? Take $\rho_{\text{He}} = 0.179 \text{ kg/m}^3$. Assume the balloon maintains a constant volume and the density of air decreases with the altitude z according to the expression $\rho_{\text{air}} = \rho_0 e^{-z/8000}$, where z is in meters and $\rho_0 = 1.20 \text{ kg/m}^3$ is the density of air at sea level.

Section 14.5 Fluid Dynamics

Section 14.6 Bernoulli's Equation

40. Water flowing through a garden hose of diameter 2.74 cm fills a 25-L bucket in 1.50 min. (a) What is the speed of the water leaving the end of the hose? (b) A nozzle is now attached to the end of the hose. If the nozzle diameter is one-third the diameter of the hose, what is the speed of the water leaving the nozzle?
41. A large storage tank, open at the top and filled with water, develops a small hole in its side at a point 16.0 m below the water level. The rate of flow from the leak is found to be $2.50 \times 10^{-3} \text{ m}^3/\text{min}$. Determine (a) the speed at which the water leaves the hole and (b) the diameter of the hole.
42. Water moves through a constricted pipe in steady, ideal flow. At the lower point shown in Figure P14.42, the pressure is $P_1 = 1.75 \times 10^4 \text{ Pa}$ and the pipe diameter is 6.00 cm. At another point $y = 0.250 \text{ m}$ higher, the pressure is $P_2 = 1.20 \times 10^4 \text{ Pa}$ and the pipe diameter is 3.00 cm. Find the speed of flow (a) in the lower section and (b) in the upper section. (c) Find the volume flow rate through the pipe.




Figure P14.42

43. Figure P14.43 on page 442 shows a stream of water in steady flow from a kitchen faucet. At the faucet, the

diameter of the stream is 0.960 cm. The stream fills a 125-cm^3 container in 16.3 s. Find the diameter of the stream 13.0 cm below the opening of the faucet.



Figure P14.43

44. A village maintains a large tank with an open top, containing water for emergencies. The water can drain from the tank through a hose of diameter 6.60 cm. The hose ends with a nozzle of diameter 2.20 cm. A rubber stopper is inserted into the nozzle. The water level in the tank is kept 7.50 m above the nozzle. (a) Calculate the friction force exerted on the stopper by the nozzle. (b) The stopper is removed. What mass of water flows from the nozzle in 2.00 h? (c) Calculate the gauge pressure of the flowing water in the hose just behind the nozzle.
45. A legendary Dutch boy saved Holland by plugging a hole of diameter 1.20 cm in a dike with his finger. If the hole was 2.00 m below the surface of the North Sea (density $1\,030\text{ kg/m}^3$), (a) what was the force on his finger? (b) If he pulled his finger out of the hole, during what time interval would the released water fill 1 acre of land to a depth of 1 ft? Assume the hole remained constant in size.
46. Water falls over a dam of height h with a mass flow rate of R , in units of kilograms per second. (a) Show that the power available from the water is

$$P = Rgh$$

where g is the free-fall acceleration. (b) Each hydroelectric unit at the Grand Coulee Dam takes in water at a rate of $8.50 \times 10^5\text{ kg/s}$ from a height of 87.0 m. The power developed by the falling water is converted to electric power with an efficiency of 85.0%. How much electric power does each hydroelectric unit produce?

47. Water is pumped up from the Colorado River to supply Grand Canyon Village, located on the rim of the canyon. The river is at an elevation of 564 m, and the village is at an elevation of 2 096 m. Imagine that the water is pumped through a single long pipe 15.0 cm in diameter, driven by a single pump at the bottom end. (a) What is the minimum pressure at which the

water must be pumped if it is to arrive at the village? (b) If $4\,500\text{ m}^3$ of water is pumped per day, what is the speed of the water in the pipe? *Note:* Assume the free-fall acceleration and the density of air are constant over this range of elevations. The pressures you calculate are too high for an ordinary pipe. The water is actually lifted in stages by several pumps through shorter pipes.

48. In ideal flow, a liquid of density 850 kg/m^3 moves from a horizontal tube of radius 1.00 cm into a second horizontal tube of radius 0.500 cm at the same elevation as the first tube. The pressure differs by ΔP between the liquid in one tube and the liquid in the second tube. (a) Find the volume flow rate as a function of ΔP . Evaluate the volume flow rate for (b) $\Delta P = 6.00\text{ kPa}$ and (c) $\Delta P = 12.0\text{ kPa}$.
49. The Venturi tube discussed in Example 14.8 and shown in Figure P14.49 may be used as a fluid flowmeter. Suppose the device is used at a service station to measure the flow rate of gasoline ($\rho = 7.00 \times 10^2\text{ kg/m}^3$) through a hose having an outlet radius of 1.20 cm. If the difference in pressure is measured to be $P_1 - P_2 = 1.20\text{ kPa}$ and the radius of the inlet tube to the meter is 2.40 cm, find (a) the speed of the gasoline as it leaves the hose and (b) the fluid flow rate in cubic meters per second.

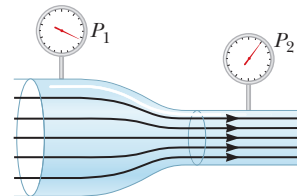


Figure P14.49

50. **Review.** Old Faithful Geyser in Yellowstone National Park erupts at approximately one-hour intervals, and the height of the water column reaches 40.0 m (Fig. P14.50). (a) Model the rising stream as a series of separate droplets. Analyze the free-fall motion of



Figure P14.50

one of the droplets to determine the speed at which the water leaves the ground. (b) **What If?** Model the rising stream as an ideal fluid in streamline flow. Use Bernoulli's equation to determine the speed of the water as it leaves ground level. (c) How does the answer from part (a) compare with the answer from part (b)? (d) What is the pressure (above atmospheric) in the heated underground chamber if its depth is 175 m? Assume the chamber is large compared with the geyser's vent.

Section 14.7 Other Applications of Fluid Dynamics

51. An airplane is cruising at altitude 10 km. The pressure outside the craft is 0.287 atm; within the passenger compartment, the pressure is 1.00 atm and the temperature is 20°C. A small leak occurs in one of the window seals in the passenger compartment. Model the air as an ideal fluid to estimate the speed of the airstream flowing through the leak.
52. An airplane has a mass of 1.60×10^4 kg, and each wing has an area of 40.0 m². During level flight, the pressure on the lower wing surface is 7.00×10^4 Pa. (a) Suppose the lift on the airplane were due to a pressure difference alone. Determine the pressure on the upper wing surface. (b) More realistically, a significant part of the lift is due to deflection of air downward by the wing. Does the inclusion of this force mean that the pressure in part (a) is higher or lower? Explain.
53. A siphon is used to drain water from a tank as illustrated in Figure P14.53. Assume steady flow without friction. (a) If $h = 1.00$ m, find the speed of outflow at the end of the siphon. (b) **What If?** What is the limitation on the height of the top of the siphon above the end of the siphon? *Note:* For the flow of the liquid to be continuous, its pressure must not drop below its vapor pressure. Assume the water is at 20.0°C, at which the vapor pressure is 2.3 kPa.

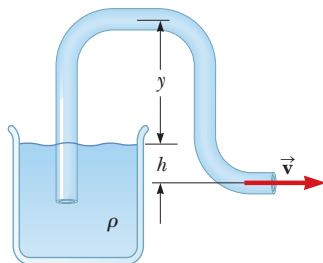


Figure P14.53

54. The Bernoulli effect can have important consequences for the design of buildings. For example, wind can blow around a skyscraper at remarkably high speed, creating low pressure. The higher atmospheric pressure in the still air inside the buildings can cause windows to pop out. As originally constructed, the John Hancock Building in Boston popped windowpanes that fell many stories to the sidewalk below. (a) Suppose a horizontal wind blows with a speed of 11.2 m/s outside a large pane of plate glass with dimensions

4.00 m × 1.50 m. Assume the density of the air to be constant at 1.20 kg/m³. The air inside the building is at atmospheric pressure. What is the total force exerted by air on the windowpane? (b) **What If?** If a second skyscraper is built nearby, the airspeed can be especially high where wind passes through the narrow separation between the buildings. Solve part (a) again with a wind speed of 22.4 m/s, twice as high.

55. A hypodermic syringe contains a medicine with the density of water (Fig. P14.55). The barrel of the syringe has a cross-sectional area $A = 2.50 \times 10^{-5}$ m², and the needle has a cross-sectional area $a = 1.00 \times 10^{-8}$ m². In the absence of a force on the plunger, the pressure everywhere is 1.00 atm. A force \vec{F} of magnitude 2.00 N acts on the plunger, making medicine squirt horizontally from the needle. Determine the speed of the medicine as it leaves the needle's tip.

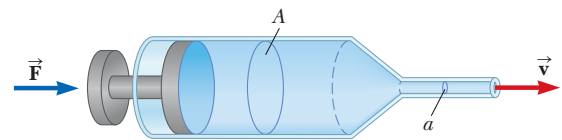


Figure P14.55

Additional Problems

56. Decades ago, it was thought that huge herbivorous dinosaurs such as *Apatosaurus* and *Brachiosaurus* habitually walked on the bottom of lakes, extending their long necks up to the surface to breathe. *Brachiosaurus* had its nostrils on the top of its head. In 1977, Knut Schmidt-Nielsen pointed out that breathing would be too much work for such a creature. For a simple model, consider a sample consisting of 10.0 L of air at absolute pressure 2.00 atm, with density 2.40 kg/m³, located at the surface of a freshwater lake. Find the work required to transport it to a depth of 10.3 m, with its temperature, volume, and pressure remaining constant. This energy investment is greater than the energy that can be obtained by metabolism of food with the oxygen in that quantity of air.
57. (a) Calculate the absolute pressure at an ocean depth of 1 000 m. Assume the density of seawater is 1 030 kg/m³ and the air above exerts a pressure of 101.3 kPa. (b) At this depth, what is the buoyant force on a spherical submarine having a diameter of 5.00 m?
58. In about 1657, Otto von Guericke, inventor of the air pump, evacuated a sphere made of two brass hemispheres (Fig. P14.58). Two teams of eight horses each could pull the hemispheres apart only on some trials and then "with greatest difficulty," with the resulting

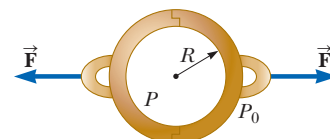


Figure P14.58

sound likened to a cannon firing. Find the force F required to pull the thin-walled evacuated hemispheres apart in terms of R , the radius of the hemispheres; P , the pressure inside the hemispheres; and atmospheric pressure P_0 .

59. A spherical aluminum ball of mass 1.26 kg contains an empty spherical cavity that is concentric with the ball. The ball barely floats in water. Calculate (a) the outer radius of the ball and (b) the radius of the cavity.
60. **GP** A helium-filled balloon (whose envelope has a mass of $m_b = 0.250$ kg) is tied to a uniform string of length $\ell = 2.00$ m and mass $m = 0.0500$ kg. The balloon is spherical with a radius of $r = 0.400$ m. When released in air of temperature 20°C and density $\rho_{\text{air}} = 1.20$ kg/m³, it lifts a length h of string and then remains stationary as shown in Figure P14.60. We wish to find the length of string lifted by the balloon. (a) When the balloon remains stationary, what is the appropriate analysis model to describe it? (b) Write a force equation for the balloon from this model in terms of the buoyant force B , the weight F_b of the balloon, the weight F_{He} of the helium, and the weight F_s of the segment of string of length h . (c) Make an appropriate substitution for each of these forces and solve symbolically for the mass m_s of the segment of string of length h in terms of m_b , r , ρ_{air} , and the density of helium ρ_{He} . (d) Find the numerical value of the mass m_s . (e) Find the length h numerically.

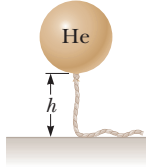


Figure P14.60

61. **AMT** **Review.** Figure P14.61 shows a valve separating a reservoir from a water tank. If this valve is opened, what is the maximum height above point B attained by the water stream coming out of the right side of the tank? Assume $h = 10.0$ m, $L = 2.00$ m, and $\theta = 30.0^\circ$, and assume the cross-sectional area at A is very large compared with that at B .

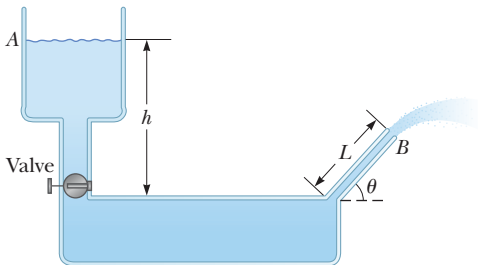


Figure P14.61

62. The true weight of an object can be measured in a vacuum, where buoyant forces are absent. A measurement in air, however, is disturbed by buoyant forces. An object of volume V is weighed in air on an equal-arm

balance with the use of counterweights of density ρ . Representing the density of air as ρ_{air} and the balance reading as F'_g , show that the true weight F_g is

$$F_g = F'_g + \left(V - \frac{F'_g}{\rho g} \right) \rho_{\text{air}} g$$

63. Water is forced out of a fire extinguisher by air pressure as shown in Figure P14.63. How much gauge air pressure in the tank is required for the water jet to have a speed of 30.0 m/s when the water level is 0.500 m below the nozzle?

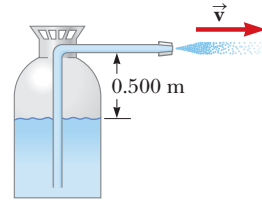


Figure P14.63

64. **Review.** Assume a certain liquid, with density 1230 kg/m³, exerts no friction force on spherical objects. A ball of mass 2.10 kg and radius 9.00 cm is dropped from rest into a deep tank of this liquid from a height of 3.30 m above the surface. (a) Find the speed at which the ball enters the liquid. (b) Evaluate the magnitudes of the two forces that are exerted on the ball as it moves through the liquid. (c) Explain why the ball moves down only a limited distance into the liquid and calculate this distance. (d) With what speed will the ball pop up out of the liquid? (e) How does the time interval Δt_{down} , during which the ball moves from the surface to its lowest point, compare with the time interval Δt_{up} for the return trip between the same two points? (f) **What If?** Now modify the model to suppose the liquid exerts a small friction force on the ball, opposite in direction to its motion. In this case, how do the time intervals Δt_{down} and Δt_{up} compare? Explain your answer with a conceptual argument rather than a numerical calculation.
65. **AMT** **Review.** A light spring of constant $k = 90.0$ N/m is attached vertically to a table (Fig. P14.65a). A 2.00 -g balloon is filled with helium (density = 0.179 kg/m³)

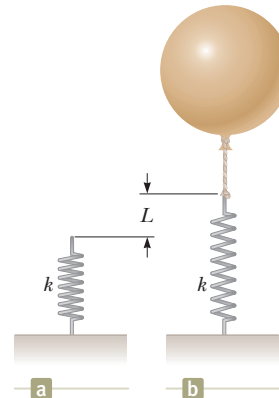


Figure P14.65

to a volume of 5.00 m^3 and is then connected with a light cord to the spring, causing the spring to stretch as shown in Figure P14.65b. Determine the extension distance L when the balloon is in equilibrium.

66. To an order of magnitude, how many helium-filled toy balloons would be required to lift you? Because helium is an irreplaceable resource, develop a theoretical answer rather than an experimental answer. In your solution, state what physical quantities you take as data and the values you measure or estimate for them.
67. A 42.0-kg boy uses a solid block of Styrofoam as a raft while fishing on a pond. The Styrofoam has an area of 1.00 m^2 and is 0.0500 m thick. While sitting on the surface of the raft, the boy finds that the raft just supports him so that the top of the raft is at the level of the pond. Determine the density of the Styrofoam.
68. A common parameter that can be used to predict turbulence in fluid flow is called the *Reynolds number*. The Reynolds number for fluid flow in a pipe is a dimensionless quantity defined as

$$\text{Re} = \frac{\rho v d}{\mu}$$

where ρ is the density of the fluid, v is its speed, d is the inner diameter of the pipe, and μ is the viscosity of the fluid. Viscosity is a measure of the internal resistance of a liquid to flow and has units of $\text{Pa} \cdot \text{s}$. The criteria for the type of flow are as follows:

- If $\text{Re} < 2\,300$, the flow is laminar.
- If $2\,300 < \text{Re} < 4\,000$, the flow is in a transition region between laminar and turbulent.
- If $\text{Re} > 4\,000$, the flow is turbulent.

(a) Let's model blood of density $1.06 \times 10^3 \text{ kg/m}^3$ and viscosity $3.00 \times 10^{-3} \text{ Pa} \cdot \text{s}$ as a pure liquid, that is, ignore the fact that it contains red blood cells. Suppose it is flowing in a large artery of radius 1.50 cm with a speed of 0.0670 m/s . Show that the flow is laminar. (b) Imagine that the artery ends in a *single* capillary so that the radius of the artery reduces to a much smaller value. What is the radius of the capillary that would cause the flow to become turbulent? (c) Actual capillaries have radii of about 5–10 micrometers, much smaller than the value in part (b). Why doesn't the flow in actual capillaries become turbulent?

69. Evangelista Torricelli was the first person to realize that we live at the bottom of an ocean of air. He correctly surmised that the pressure of our atmosphere is attributable to the weight of the air. The density of air at 0°C at the Earth's surface is 1.29 kg/m^3 . The density decreases with increasing altitude (as the atmosphere thins). On the other hand, if we assume the density is constant at 1.29 kg/m^3 up to some altitude h and is zero above that altitude, then h would represent the depth of the ocean of air. (a) Use this model to determine the value of h that gives a pressure of 1.00 atm at the surface of the Earth. (b) Would the peak of Mount Everest rise above the surface of such an atmosphere?

70. **Review.** With reference to the dam studied in Example 14.4 and shown in Figure 14.5, (a) show that the total torque exerted by the water behind the dam about a horizontal axis through O is $\frac{1}{6}\rho g w H^3$. (b) Show that the effective line of action of the total force exerted by the water is at a distance $\frac{1}{3}H$ above O .

71. A 1.00-kg beaker containing 2.00 kg of oil (density = 916.0 kg/m^3) rests on a scale. A 2.00-kg block of iron suspended from a spring scale is completely submerged in the oil as shown in Figure P14.71. Determine the equilibrium readings of both scales.

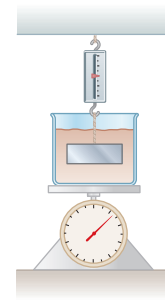


Figure P14.71 Problems 71 and 72.

72. A beaker of mass m_b containing oil of mass m_o and density ρ_o rests on a scale. A block of iron of mass m_{Fe} suspended from a spring scale is completely submerged in the oil as shown in Figure P14.71. Determine the equilibrium readings of both scales.

73. In 1983, the United States began coining the one-cent piece out of copper-clad zinc rather than pure copper. The mass of the old copper penny is 3.083 g and that of the new cent is 2.517 g . The density of copper is 8.920 g/cm^3 and that of zinc is 7.133 g/cm^3 . The new and old coins have the same volume. Calculate the percent of zinc (by volume) in the new cent.

74. **Review.** A long, cylindrical rod of radius r is weighted on one end so that it floats upright in a fluid having a density ρ . It is pushed down a distance x from its equilibrium position and released. Show that the rod will execute simple harmonic motion if the resistive effects of the fluid are negligible, and determine the period of the oscillations.

75. **Review.** Figure P14.75 shows the essential parts of a hydraulic brake system. The area of the piston in the master cylinder is 1.8 cm^2 and that of the piston

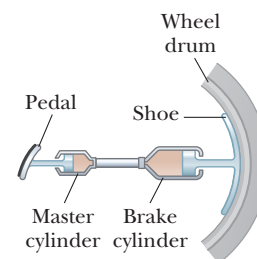


Figure P14.75

in the brake cylinder is 6.4 cm^2 . The coefficient of friction between shoe and wheel drum is 0.50. If the wheel has a radius of 34 cm, determine the frictional torque about the axle when a force of 44 N is exerted on the brake pedal.

76. The *spirit-in-glass thermometer*, invented in Florence, Italy, around 1654, consists of a tube of liquid (the spirit) containing a number of submerged glass spheres with slightly different masses (Fig. P14.76). At sufficiently low temperatures, all the spheres float, but as the temperature rises, the spheres sink one after another. The device is a crude but interesting tool for measuring temperature. Suppose the tube is filled with ethyl alcohol, whose density is 0.78945 g/cm^3 at 20.0°C and decreases to 0.78097 g/cm^3 at 30.0°C . (a) Assuming that one of the spheres has a radius of 1.000 cm and is in equilibrium halfway up the tube at 20.0°C , determine its mass. (b) When the temperature increases to 30.0°C , what mass must a second sphere of the same radius have to be in equilibrium at the halfway point? (c) At 30.0°C , the first sphere has fallen to the bottom of the tube. What upward force does the bottom of the tube exert on this sphere?



Figure P14.76

77. **Review.** A uniform disk of mass 10.0 kg and radius 0.250 m spins at 300 rev/min on a low-friction axle. It must be brought to a stop in 1.00 min by a brake pad that makes contact with the disk at an average distance 0.220 m from the axis. The coefficient of friction between pad and disk is 0.500. A piston in a cylinder of diameter 5.00 cm presses the brake pad against the disk. Find the pressure required for the brake fluid in the cylinder.
78. **Review.** In a water pistol, a piston drives water through a large tube of area A_1 into a smaller tube of area A_2 as shown in Figure P14.78. The radius of the large tube is 1.00 cm and that of the small tube is 1.00 mm. The smaller tube is 3.00 cm above the larger tube. (a) If the pistol is fired horizontally at a height of 1.50 m, determine the time interval required for the water to

travel from the nozzle to the ground. Neglect air resistance and assume atmospheric pressure is 1.00 atm. (b) If the desired range of the stream is 8.00 m, with what speed v_2 must the stream leave the nozzle? (c) At what speed v_1 must the plunger be moved to achieve the desired range? (d) What is the pressure at the nozzle? (e) Find the pressure needed in the larger tube. (f) Calculate the force that must be exerted on the trigger to achieve the desired range. (The force that must be exerted is due to pressure over and above atmospheric pressure.)

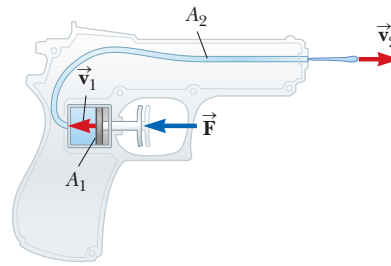


Figure P14.78

79. An incompressible, nonviscous fluid is initially at rest in the vertical portion of the pipe shown in Figure P14.79a, where $L = 2.00 \text{ m}$. When the valve is opened, the fluid flows into the horizontal section of the pipe. What is the fluid's speed when all the fluid is in the horizontal section as shown in Figure P14.79b? Assume the cross-sectional area of the entire pipe is constant.

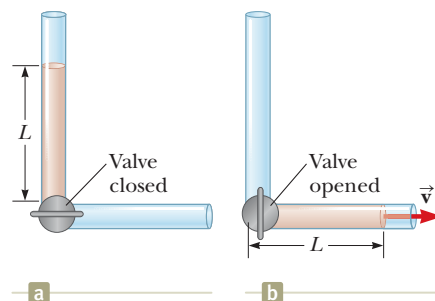


Figure P14.79

80. The water supply of a building is fed through a main pipe 6.00 cm in diameter. A 2.00-cm-diameter faucet tap, located 2.00 m above the main pipe, is observed to fill a 25.0-L container in 30.0 s. (a) What is the speed at which the water leaves the faucet? (b) What is the gauge pressure in the 6-cm main pipe? Assume the faucet is the only "leak" in the building.
81. A U-tube open at both ends is partially filled with water (Fig. P14.81a). Oil having a density 750 kg/m^3 is then poured into the right arm and forms a column $L = 5.00 \text{ cm}$ high (Fig. P14.81b). (a) Determine the difference h in the heights of the two liquid surfaces. (b) The right arm is then shielded from any air motion while air is blown across the top of the left arm until the surfaces of the two liquids are at the same height (Fig. P14.81c). Determine the speed of the air being

blown across the left arm. Take the density of air as constant at 1.20 kg/m^3 .

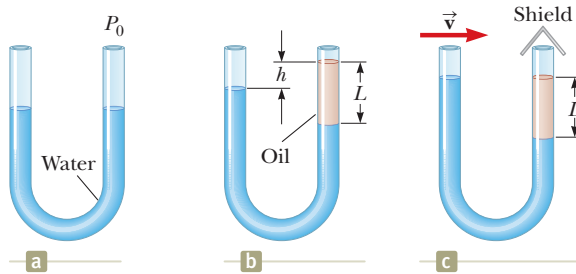


Figure P14.81

82. A woman is draining her fish tank by siphoning the water into an outdoor drain as shown in Figure P14.82. The rectangular tank has footprint area A and depth h . The drain is located a distance d below the surface of the water in the tank, where $d \gg h$. The cross-sectional area of the siphon tube is A' . Model the water as flowing without friction. Show that the time interval required to empty the tank is given by

$$\Delta t = \frac{Ah}{A'\sqrt{2gd}}$$

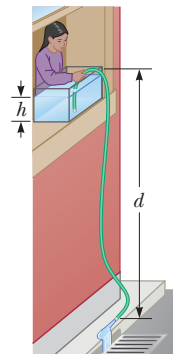


Figure P14.82

83. The hull of an experimental boat is to be lifted above the water by a hydrofoil mounted below its keel as shown in Figure P14.83. The hydrofoil has a shape like that of an airplane wing. Its area projected onto a horizontal surface is A . When the boat is towed at sufficiently high speed, water of density ρ moves in streamline flow so that its average speed at the top of the hydrofoil is n times larger than its speed v_b below the hydrofoil. (a) Ignoring the buoyant force, show that the upward lift force exerted by the water on the hydrofoil has a magnitude

$$F \approx \frac{1}{2}(n^2 - 1)\rho v_b^2 A$$

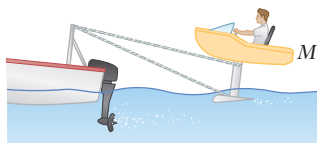


Figure P14.83

- (b) The boat has mass M . Show that the liftoff speed is given by

$$v \approx \sqrt{\frac{2Mg}{(n^2 - 1)A\rho}}$$

84. A jet of water squirts out horizontally from a hole near the bottom of the tank shown in Figure P14.84. If the hole has a diameter of 3.50 mm , what is the height h of the water level in the tank?

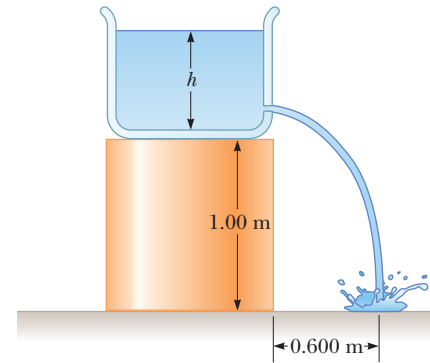


Figure P14.84

Challenge Problems

85. An ice cube whose edges measure 20.0 mm is floating in a glass of ice-cold water, and one of the ice cube's faces is parallel to the water's surface. (a) How far below the water surface is the bottom face of the block? (b) Ice-cold ethyl alcohol is gently poured onto the water surface to form a layer 5.00 mm thick above the water. The alcohol does not mix with the water. When the ice cube again attains hydrostatic equilibrium, what is the distance from the top of the water to the bottom face of the block? (c) Additional cold ethyl alcohol is poured onto the water's surface until the top surface of the alcohol coincides with the top surface of the ice cube (in hydrostatic equilibrium). How thick is the required layer of ethyl alcohol?
86. Why is the following situation impossible? A barge is carrying a load of small pieces of iron along a river. The iron pile is in the shape of a cone for which the radius r of the base of the cone is equal to the central height h of the cone. The barge is square in shape, with vertical sides of length $2r$, so that the pile of iron comes just up to the edges of the barge. The barge approaches a low bridge, and the captain realizes that the top of the pile of iron is not going to make it under the bridge. The captain orders the crew to shovel iron pieces from the pile into the water to reduce the height of the pile. As iron is shoveled from the pile, the pile always has the shape of a cone whose diameter is equal to the side length of the barge. After a certain volume of iron is removed from the barge, it makes it under the bridge without the top of the pile striking the bridge.
87. Show that the variation of atmospheric pressure with altitude is given by $P = P_0 e^{-\alpha y}$, where $\alpha = \rho_0 g / P_0$, P_0

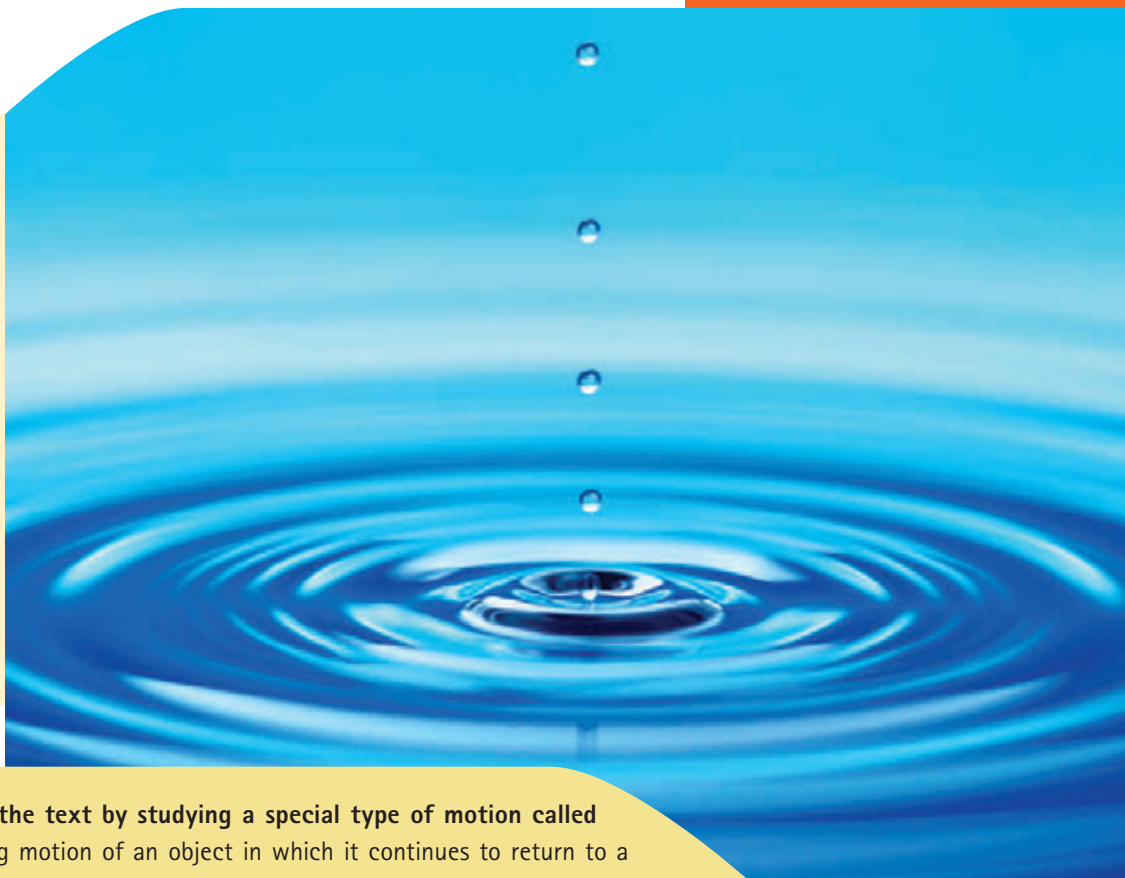
is atmospheric pressure at some reference level $y = 0$, and ρ_0 is the atmospheric density at this level. Assume the decrease in atmospheric pressure over an infinitesimal change in altitude (so that the density is approximately uniform over the infinitesimal change) can be

expressed from Equation 14.4 as $dP = -\rho g dy$. Also assume the density of air is proportional to the pressure, which, as we will see in Chapter 20, is equivalent to assuming the temperature of the air is the same at all altitudes.

Oscillations and Mechanical Waves

PART 2

Falling drops of water cause a water surface to oscillate. These oscillations are associated with circular waves moving away from the point at which the drops fall. In Part 2 of the text, we will explore the principles related to oscillations and waves. (Marga Buschbell Steeger/Photographer's Choice/Getty Images)



We begin this new part of the text by studying a special type of motion called *periodic* motion, the repeating motion of an object in which it continues to return to a given position after a fixed time interval. The repetitive movements of such an object are called *oscillations*. We will focus our attention on a special case of periodic motion called *simple harmonic motion*. All periodic motions can be modeled as combinations of simple harmonic motions.

Simple harmonic motion also forms the basis for our understanding of *mechanical waves*. Sound waves, seismic waves, waves on stretched strings, and water waves are all produced by some source of oscillation. As a sound wave travels through the air, elements of the air oscillate back and forth; as a water wave travels across a pond, elements of the water oscillate up and down and backward and forward. The motion of the elements of the medium bears a strong resemblance to the periodic motion of an oscillating pendulum or an object attached to a spring.

To explain many other phenomena in nature, we must understand the concepts of oscillations and waves. For instance, although skyscrapers and bridges appear to be rigid, they actually oscillate, something the architects and engineers who design and build them must take into account. To understand how radio and television work, we must understand the origin and nature of electromagnetic waves and how they propagate through space. Finally, much of what scientists have learned about atomic structure has come from information carried by waves. Therefore, we must first study oscillations and waves if we are to understand the concepts and theories of atomic physics. ■

Oscillatory Motion

- 15.1 Motion of an Object Attached to a Spring
- 15.2 Analysis Model: Particle in Simple Harmonic Motion
- 15.3 Energy of the Simple Harmonic Oscillator
- 15.4 Comparing Simple Harmonic Motion with Uniform Circular Motion
- 15.5 The Pendulum
- 15.6 Damped Oscillations
- 15.7 Forced Oscillations



The London Millennium Bridge over the River Thames in London. On opening day of the bridge, pedestrians noticed a swinging motion of the bridge, leading to its being named the "Wobbly Bridge." The bridge was closed after two days and remained closed for two years. Over 50 *tuned mass dampers* were added to the bridge: the pairs of spring-loaded structures on top of the cross members (arrow). We will study both oscillations and damping of oscillations in this chapter. (Monkey Business Images/Shutterstock.com)

Periodic motion is motion of an object that regularly returns to a given position after a fixed time interval. With a little thought, we can identify several types of periodic motion in everyday life. Your car returns to the driveway each afternoon. You return to the dinner table each night to eat. A bumped chandelier swings back and forth, returning to the same position at a regular rate. The Earth returns to the same position in its orbit around the Sun each year, resulting in the variation among the four seasons.

A special kind of periodic motion occurs in mechanical systems when the force acting on an object is proportional to the position of the object relative to some equilibrium position. If this force is always directed toward the equilibrium position, the motion is called *simple harmonic motion*, which is the primary focus of this chapter.

15.1 Motion of an Object Attached to a Spring

As a model for simple harmonic motion, consider a block of mass m attached to the end of a spring, with the block free to move on a frictionless, horizontal surface

(Fig. 15.1). When the spring is neither stretched nor compressed, the block is at rest at the position called the **equilibrium position** of the system, which we identify as $x = 0$ (Fig. 15.1b). We know from experience that such a system oscillates back and forth if disturbed from its equilibrium position.

We can understand the oscillating motion of the block in Figure 15.1 qualitatively by first recalling that when the block is displaced to a position x , the spring exerts on the block a force that is proportional to the position and given by **Hooke's law** (see Section 7.4):

$$F_s = -kx \quad (15.1)$$

◀ Hooke's law

We call F_s a **restoring force** because it is always directed toward the equilibrium position and therefore *opposite* the displacement of the block from equilibrium. That is, when the block is displaced to the right of $x = 0$ in Figure 15.1a, the position is positive and the restoring force is directed to the left. When the block is displaced to the left of $x = 0$ as in Figure 15.1c, the position is negative and the restoring force is directed to the right.

When the block is displaced from the equilibrium point and released, it is a particle under a net force and consequently undergoes an acceleration. Applying the particle under a net force model to the motion of the block, with Equation 15.1 providing the net force in the x direction, we obtain

$$\begin{aligned} \sum F_x = ma_x &\rightarrow -kx = ma_x \\ a_x &= -\frac{k}{m}x \end{aligned} \quad (15.2)$$

That is, the acceleration of the block is proportional to its position, and the direction of the acceleration is opposite the direction of the displacement of the block from equilibrium. Systems that behave in this way are said to exhibit **simple harmonic motion**. An object moves with simple harmonic motion whenever its acceleration is proportional to its position and is oppositely directed to the displacement from equilibrium.

If the block in Figure 15.1 is displaced to a position $x = A$ and released from rest, its *initial* acceleration is $-kA/m$. When the block passes through the equilibrium position $x = 0$, its acceleration is zero. At this instant, its speed is a maximum because the acceleration changes sign. The block then continues to travel to the left of equilibrium with a positive acceleration and finally reaches $x = -A$, at which time its acceleration is $+kA/m$ and its speed is again zero as discussed in Sections 7.4 and 7.9. The block completes a full cycle of its motion by returning to the original position, again passing through $x = 0$ with maximum speed. Therefore, the block oscillates between the turning points $x = \pm A$. In the absence of

Pitfall Prevention 15.1

The Orientation of the Spring Figure 15.1 shows a *horizontal* spring, with an attached block sliding on a frictionless surface. Another possibility is a block hanging from a *vertical* spring. All the results we discuss for the horizontal spring are the same for the vertical spring with one exception: when the block is placed on the vertical spring, its weight causes the spring to extend. If the resting position of the block is defined as $x = 0$, the results of this chapter also apply to this vertical system.

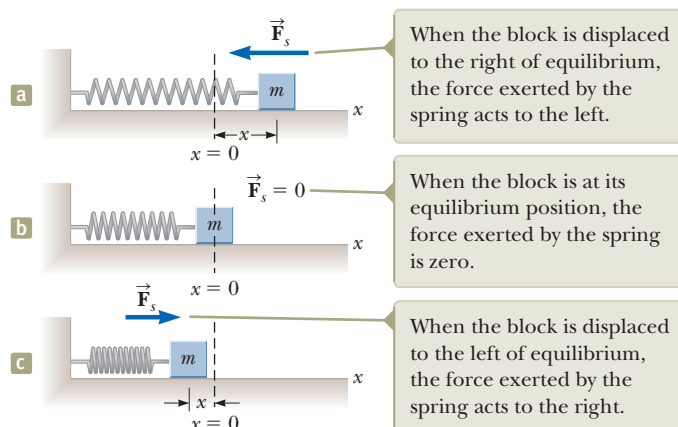


Figure 15.1 A block attached to a spring moving on a frictionless surface.

friction, this idealized motion will continue forever because the force exerted by the spring is conservative. Real systems are generally subject to friction, so they do not oscillate forever. We shall explore the details of the situation with friction in Section 15.6.

- Quick Quiz 15.1** A block on the end of a spring is pulled to position $x = A$ and released from rest. In one full cycle of its motion, through what total distance does it travel? (a) $A/2$ (b) A (c) $2A$ (d) $4A$

15.2 Analysis Model: Particle in Simple Harmonic Motion

The motion described in the preceding section occurs so often that we identify the **particle in simple harmonic motion** model to represent such situations. To develop a mathematical representation for this model, we will generally choose x as the axis along which the oscillation occurs; hence, we will drop the subscript- x notation in this discussion. Recall that, by definition, $a = dv/dt = d^2x/dt^2$, so we can express Equation 15.2 as

$$\frac{d^2x}{dt^2} = -\frac{k}{m}x \quad (15.3)$$

If we denote the ratio k/m with the symbol ω^2 (we choose ω^2 rather than ω so as to make the solution we develop below simpler in form), then

$$\omega^2 = \frac{k}{m} \quad (15.4)$$

and Equation 15.3 can be written in the form

$$\frac{d^2x}{dt^2} = -\omega^2x \quad (15.5)$$

Let's now find a mathematical solution to Equation 15.5, that is, a function $x(t)$ that satisfies this second-order differential equation and is a mathematical representation of the position of the particle as a function of time. We seek a function whose second derivative is the same as the original function with a negative sign and multiplied by ω^2 . The trigonometric functions sine and cosine exhibit this behavior, so we can build a solution around one or both of them. The following cosine function is a solution to the differential equation:

$$x(t) = A \cos(\omega t + \phi) \quad (15.6)$$

where A , ω , and ϕ are constants. To show explicitly that this solution satisfies Equation 15.5, notice that

$$\frac{dx}{dt} = A \frac{d}{dt} \cos(\omega t + \phi) = -\omega A \sin(\omega t + \phi) \quad (15.7)$$

$$\frac{d^2x}{dt^2} = -\omega A \frac{d}{dt} \sin(\omega t + \phi) = -\omega^2 A \cos(\omega t + \phi) \quad (15.8)$$

Comparing Equations 15.6 and 15.8, we see that $d^2x/dt^2 = -\omega^2x$ and Equation 15.5 is satisfied.

The parameters A , ω , and ϕ are constants of the motion. To give physical significance to these constants, it is convenient to form a graphical representation of the motion by plotting x as a function of t as in Figure 15.2a. First, A , called the **amplitude** of the motion, is simply the maximum value of the position of the particle in

Pitfall Prevention 15.2

A Nonconstant Acceleration The acceleration of a particle in simple harmonic motion is not constant. Equation 15.3 shows that its acceleration varies with position x . Therefore, we *cannot* apply the kinematic equations of Chapter 2 in this situation.

Position versus time for a particle in simple harmonic motion

Pitfall Prevention 15.3

Where's the Triangle? Equation 15.6 includes a trigonometric function, a *mathematical function* that can be used whether it refers to a triangle or not. In this case, the cosine function happens to have the correct behavior for representing the position of a particle in simple harmonic motion.

either the positive or negative x direction. The constant ω is called the **angular frequency**, and it has units¹ of radians per second. It is a measure of how rapidly the oscillations are occurring; the more oscillations per unit time, the higher the value of ω . From Equation 15.4, the angular frequency is

$$\omega = \sqrt{\frac{k}{m}} \quad (15.9)$$

The constant angle ϕ is called the **phase constant** (or initial phase angle) and, along with the amplitude A , is determined uniquely by the position and velocity of the particle at $t = 0$. If the particle is at its maximum position $x = A$ at $t = 0$, the phase constant is $\phi = 0$ and the graphical representation of the motion is as shown in Figure 15.2b. The quantity $(\omega t + \phi)$ is called the **phase** of the motion. Notice that the function $x(t)$ is periodic and its value is the same each time ωt increases by 2π radians.

Equations 15.1, 15.5, and 15.6 form the basis of the mathematical representation of the particle in simple harmonic motion model. If you are analyzing a situation and find that the force on an object modeled as a particle is of the mathematical form of Equation 15.1, you know the motion is that of a simple harmonic oscillator and the position of the particle is described by Equation 15.6. If you analyze a system and find that it is described by a differential equation of the form of Equation 15.5, the motion is that of a simple harmonic oscillator. If you analyze a situation and find that the position of a particle is described by Equation 15.6, you know the particle undergoes simple harmonic motion.

Quick Quiz 15.2 Consider a graphical representation (Fig. 15.3) of simple harmonic motion as described mathematically in Equation 15.6. When the particle is at point **A** on the graph, what can you say about its position and velocity?
 (a) The position and velocity are both positive. (b) The position and velocity are both negative. (c) The position is positive, and the velocity is zero. (d) The position is negative, and the velocity is zero. (e) The position is positive, and the velocity is negative. (f) The position is negative, and the velocity is positive.

Quick Quiz 15.3 Figure 15.4 shows two curves representing particles undergoing simple harmonic motion. The correct description of these two motions is that the simple harmonic motion of particle B is (a) of larger angular frequency and larger amplitude than that of particle A, (b) of larger angular frequency and smaller amplitude than that of particle A, (c) of smaller angular frequency and larger amplitude than that of particle A, or (d) of smaller angular frequency and smaller amplitude than that of particle A.

Let us investigate further the mathematical description of simple harmonic motion. The **period** T of the motion is the time interval required for the particle to go through one full cycle of its motion (Fig. 15.2a). That is, the values of x and v for the particle at time t equal the values of x and v at time $t + T$. Because the phase increases by 2π radians in a time interval of T ,

$$[\omega(t + T) + \phi] - (\omega t + \phi) = 2\pi$$

¹We have seen many examples in earlier chapters in which we evaluate a trigonometric function of an angle. The argument of a trigonometric function, such as sine or cosine, *must* be a pure number. The radian is a pure number because it is a ratio of lengths. Angles in degrees are pure numbers because the degree is an artificial “unit”; it is not related to measurements of lengths. The argument of the trigonometric function in Equation 15.6 must be a pure number. Therefore, ω *must* be expressed in radians per second (and not, for example, in revolutions per second) if t is expressed in seconds. Furthermore, other types of functions such as logarithms and exponential functions require arguments that are pure numbers.

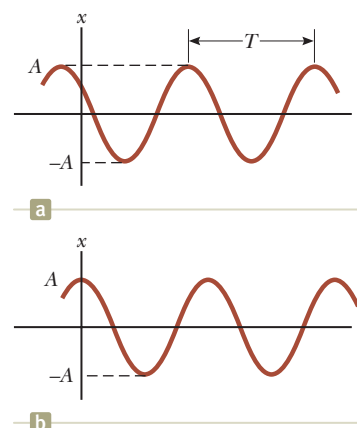


Figure 15.2 (a) An $x-t$ graph for a particle undergoing simple harmonic motion. The amplitude of the motion is A , and the period (defined in Eq. 15.10) is T . (b) The $x-t$ graph for the special case in which $x = A$ at $t = 0$ and hence $\phi = 0$.

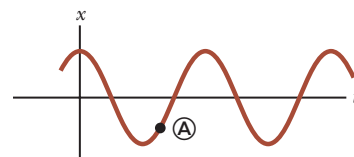


Figure 15.3 (Quick Quiz 15.2) An $x-t$ graph for a particle undergoing simple harmonic motion. At a particular time, the particle's position is indicated by **A** in the graph.

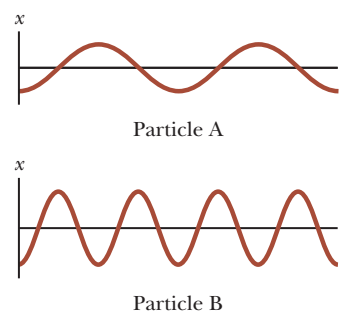


Figure 15.4 (Quick Quiz 15.3) Two $x-t$ graphs for particles undergoing simple harmonic motion. The amplitudes and frequencies are different for the two particles.

Pitfall Prevention 15.4

Two Kinds of Frequency We identify two kinds of frequency for a simple harmonic oscillator: f , called simply the *frequency*, is measured in hertz, and ω , the *angular frequency*, is measured in radians per second. Be sure you are clear about which frequency is being discussed or requested in a given problem. Equations 15.11 and 15.12 show the relationship between the two frequencies.

Simplifying this expression gives $\omega T = 2\pi$, or

$$T = \frac{2\pi}{\omega} \quad (15.10)$$

The inverse of the period is called the **frequency** f of the motion. Whereas the period is the time interval per oscillation, the frequency represents the number of oscillations the particle undergoes per unit time interval:

$$f = \frac{1}{T} = \frac{\omega}{2\pi} \quad (15.11)$$

The units of f are cycles per second, or **hertz** (Hz). Rearranging Equation 15.11 gives

$$\omega = 2\pi f = \frac{2\pi}{T} \quad (15.12)$$

Equations 15.9 through 15.11 can be used to express the period and frequency of the motion for the particle in simple harmonic motion in terms of the characteristics m and k of the system as

Period ►

$$T = \frac{2\pi}{\omega} = 2\pi\sqrt{\frac{m}{k}} \quad (15.13)$$

Frequency ►

$$f = \frac{1}{T} = \frac{1}{2\pi}\sqrt{\frac{k}{m}} \quad (15.14)$$

That is, the period and frequency *depend only* on the mass of the particle and the force constant of the spring and *not* on the parameters of the motion, such as A or ϕ . As we might expect, the frequency is larger for a stiffer spring (larger value of k) and decreases with increasing mass of the particle.

We can obtain the velocity and acceleration² of a particle undergoing simple harmonic motion from Equations 15.7 and 15.8:

Velocity of a particle in simple harmonic motion ►

$$v = \frac{dx}{dt} = -\omega A \sin(\omega t + \phi) \quad (15.15)$$

Acceleration of a particle in simple harmonic motion ►

$$a = \frac{d^2x}{dt^2} = -\omega^2 A \cos(\omega t + \phi) \quad (15.16)$$

From Equation 15.15, we see that because the sine and cosine functions oscillate between ± 1 , the extreme values of the velocity v are $\pm\omega A$. Likewise, Equation 15.16 shows that the extreme values of the acceleration a are $\pm\omega^2 A$. Therefore, the *maximum* values of the magnitudes of the velocity and acceleration are

Maximum magnitudes of velocity and acceleration in simple harmonic motion ►

$$v_{\max} = \omega A = \sqrt{\frac{k}{m}} A \quad (15.17)$$

$$a_{\max} = \omega^2 A = \frac{k}{m} A \quad (15.18)$$

Figure 15.5a plots position versus time for an arbitrary value of the phase constant. The associated velocity–time and acceleration–time curves are illustrated in Figures 15.5b and 15.5c, respectively. They show that the phase of the velocity differs from the phase of the position by $\pi/2$ rad, or 90° . That is, when x is a maximum or a minimum, the velocity is zero. Likewise, when x is zero, the speed is a maximum. Furthermore, notice that the phase of the acceleration differs from the phase of the position by π radians, or 180° . For example, when x is a maximum, a has a maximum magnitude in the opposite direction.

²Because the motion of a simple harmonic oscillator takes place in one dimension, we denote velocity as v and acceleration as a , with the direction indicated by a positive or negative sign as in Chapter 2.

- Quick Quiz 15.4** An object of mass m is hung from a spring and set into oscillation. The period of the oscillation is measured and recorded as T . The object of mass m is removed and replaced with an object of mass $2m$. When this object is set into oscillation, what is the period of the motion? (a) $2T$ (b) $\sqrt{2}T$ (c) T (d) $T/\sqrt{2}$ (e) $T/2$

Equation 15.6 describes simple harmonic motion of a particle in general. Let's now see how to evaluate the constants of the motion. The angular frequency ω is evaluated using Equation 15.9. The constants A and ϕ are evaluated from the initial conditions, that is, the state of the oscillator at $t = 0$.

Suppose a block is set into motion by pulling it from equilibrium by a distance A and releasing it from rest at $t = 0$ as in Figure 15.6. We must then require our solutions for $x(t)$ and $v(t)$ (Eqs. 15.6 and 15.15) to obey the initial conditions that $x(0) = A$ and $v(0) = 0$:

$$\begin{aligned}x(0) &= A \cos \phi = A \\v(0) &= -\omega A \sin \phi = 0\end{aligned}$$

These conditions are met if $\phi = 0$, giving $x = A \cos \omega t$ as our solution. To check this solution, notice that it satisfies the condition that $x(0) = A$ because $\cos 0 = 1$.

The position, velocity, and acceleration of the block versus time are plotted in Figure 15.7a for this special case. The acceleration reaches extreme values of $\mp\omega^2 A$ when the position has extreme values of $\pm A$. Furthermore, the velocity has extreme values of $\pm\omega A$, which both occur at $x = 0$. Hence, the quantitative solution agrees with our qualitative description of this system.

Let's consider another possibility. Suppose the system is oscillating and we define $t = 0$ as the instant the block passes through the unstretched position of the spring while moving to the right (Fig. 15.8). In this case, our solutions for $x(t)$ and $v(t)$ must obey the initial conditions that $x(0) = 0$ and $v(0) = v_i$:

$$\begin{aligned}x(0) &= A \cos \phi = 0 \\v(0) &= -\omega A \sin \phi = v_i\end{aligned}$$

The first of these conditions tells us that $\phi = \pm\pi/2$. With these choices for ϕ , the second condition tells us that $A = \mp v_i/\omega$. Because the initial velocity is positive and the amplitude must be positive, we must have $\phi = -\pi/2$. Hence, the solution is

$$x = \frac{v_i}{\omega} \cos\left(\omega t - \frac{\pi}{2}\right)$$

The graphs of position, velocity, and acceleration versus time for this choice of $t = 0$ are shown in Figure 15.7b. Notice that these curves are the same as those in Figure

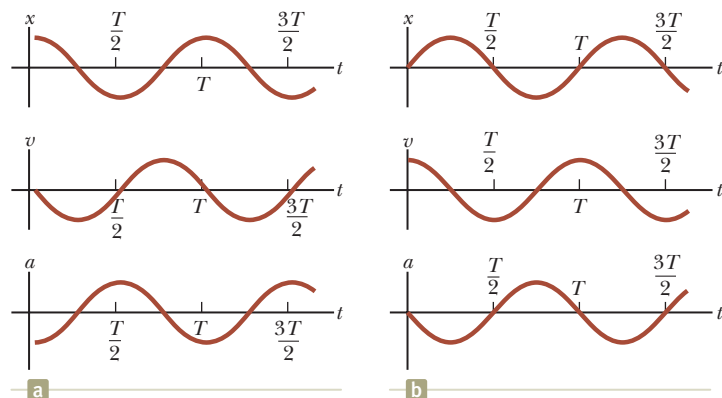


Figure 15.7 (a) Position, velocity, and acceleration versus time for the block in Figure 15.6 under the initial conditions that at $t = 0$, $x(0) = A$, and $v(0) = 0$. (b) Position, velocity, and acceleration versus time for the block in Figure 15.8 under the initial conditions that at $t = 0$, $x(0) = 0$, and $v(0) = v_i$.

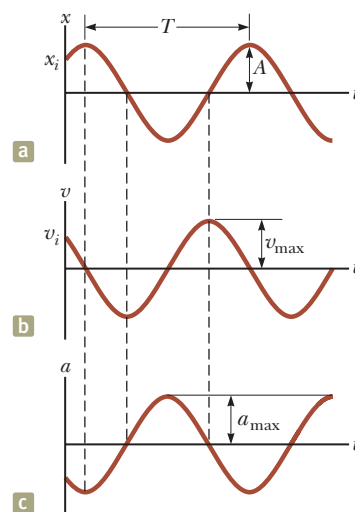


Figure 15.5 Graphical representation of simple harmonic motion. (a) Position versus time. (b) Velocity versus time. (c) Acceleration versus time. Notice that at any specified time the velocity is 90° out of phase with the position and the acceleration is 180° out of phase with the position.

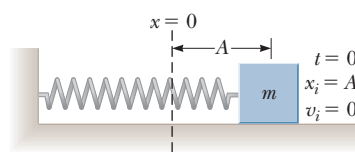


Figure 15.6 A block-spring system that begins its motion from rest with the block at $x = A$ at $t = 0$.

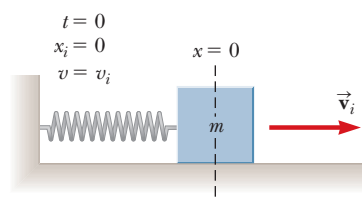


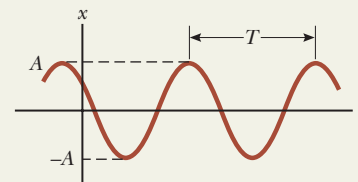
Figure 15.8 The block-spring system is undergoing oscillation, and $t = 0$ is defined at an instant when the block passes through the equilibrium position $x = 0$ and is moving to the right with speed v_i .

15.7a, but shifted to the right by one-fourth of a cycle. This shift is described mathematically by the phase constant $\phi = -\pi/2$, which is one-fourth of a full cycle of 2π .

Analysis Model Particle in Simple Harmonic Motion

Imagine an object that is subject to a force that is proportional to the negative of the object's position, $F = -kx$. Such a force equation is known as Hooke's law, and it describes the force applied to an object attached to an ideal spring. The parameter k in Hooke's law is called the *spring constant* or the *force constant*. The position of an object acted on by a force described by Hooke's law is given by

$$x(t) = A \cos(\omega t + \phi) \quad (15.6)$$



where A is the **amplitude** of the motion, ω is the **angular frequency**, and ϕ is the **phase constant**. The values of A and ϕ depend on the initial position and initial velocity of the particle.

The **period** of the oscillation of the particle is

$$T = \frac{2\pi}{\omega} = 2\pi\sqrt{\frac{m}{k}} \quad (15.13)$$

and the inverse of the period is the **frequency**.

Examples:

- a bungee jumper hangs from a bungee cord and oscillates up and down
- a guitar string vibrates back and forth in a standing wave, with each element of the string moving in simple harmonic motion (Chapter 18)
- a piston in a gasoline engine oscillates up and down within the cylinder of the engine (Chapter 22)
- an atom in a diatomic molecule vibrates back and forth as if it is connected by a spring to the other atom in the molecule (Chapter 43)

Example 15.1 A Block–Spring System AM

A 200-g block connected to a light spring for which the force constant is 5.00 N/m is free to oscillate on a frictionless, horizontal surface. The block is displaced 5.00 cm from equilibrium and released from rest as in Figure 15.6.

(A) Find the period of its motion.

SOLUTION

Conceptualize Study Figure 15.6 and imagine the block moving back and forth in simple harmonic motion once it is released. Set up an experimental model in the vertical direction by hanging a heavy object such as a stapler from a strong rubber band.

Categorize The block is modeled as a *particle in simple harmonic motion*.

Analyze

Use Equation 15.9 to find the angular frequency of the block–spring system:

$$\omega = \sqrt{\frac{k}{m}} = \sqrt{\frac{5.00 \text{ N/m}}{200 \times 10^{-3} \text{ kg}}} = 5.00 \text{ rad/s}$$

Use Equation 15.13 to find the period of the system:

$$T = \frac{2\pi}{\omega} = \frac{2\pi}{5.00 \text{ rad/s}} = 1.26 \text{ s}$$

(B) Determine the maximum speed of the block.

SOLUTION

Use Equation 15.17 to find v_{\max} :

$$v_{\max} = \omega A = (5.00 \text{ rad/s})(5.00 \times 10^{-2} \text{ m}) = 0.250 \text{ m/s}$$

(C) What is the maximum acceleration of the block?

► 15.1 continued

SOLUTIONUse Equation 15.18 to find a_{\max} :

$$a_{\max} = \omega^2 A = (5.00 \text{ rad/s})^2 (5.00 \times 10^{-2} \text{ m}) = 1.25 \text{ m/s}^2$$

(D) Express the position, velocity, and acceleration as functions of time in SI units.**SOLUTION**Find the phase constant from the initial condition that $x = A$ at $t = 0$:

$$x(0) = A \cos \phi = A \rightarrow \phi = 0$$

Use Equation 15.6 to write an expression for $x(t)$:

$$x = A \cos (\omega t + \phi) = 0.0500 \cos 5.00t$$

Use Equation 15.15 to write an expression for $v(t)$:

$$v = -\omega A \sin (\omega t + \phi) = -0.250 \sin 5.00t$$

Use Equation 15.16 to write an expression for $a(t)$:

$$a = -\omega^2 A \cos (\omega t + \phi) = -1.25 \cos 5.00t$$

Finalize Consider part (a) of Figure 15.7, which shows the graphical representations of the motion of the block in this problem. Make sure that the mathematical representations found above in part (D) are consistent with these graphical representations.**WHAT IF?** What if the block were released from the same initial position, $x_i = 5.00 \text{ cm}$, but with an initial velocity of $v_i = -0.100 \text{ m/s}$? Which parts of the solution change, and what are the new answers for those that do change?**Answers** Part (A) does not change because the period is independent of how the oscillator is set into motion. Parts (B), (C), and (D) will change.

Write position and velocity expressions for the initial conditions:

$$(1) \quad x(0) = A \cos \phi = x_i$$

$$(2) \quad v(0) = -\omega A \sin \phi = v_i$$

Divide Equation (2) by Equation (1) to find the phase constant:

$$\frac{-\omega A \sin \phi}{A \cos \phi} = \frac{v_i}{x_i}$$

$$\tan \phi = -\frac{v_i}{\omega x_i} = -\frac{-0.100 \text{ m/s}}{(5.00 \text{ rad/s})(0.0500 \text{ m})} = 0.400$$

$$\phi = \tan^{-1}(0.400) = 0.121\pi$$

Use Equation (1) to find A :

$$A = \frac{x_i}{\cos \phi} = \frac{0.0500 \text{ m}}{\cos(0.121\pi)} = 0.0539 \text{ m}$$

Find the new maximum speed:

$$v_{\max} = \omega A = (5.00 \text{ rad/s})(5.39 \times 10^{-2} \text{ m}) = 0.269 \text{ m/s}$$

Find the new magnitude of the maximum acceleration:

$$a_{\max} = \omega^2 A = (5.00 \text{ rad/s})^2 (5.39 \times 10^{-2} \text{ m}) = 1.35 \text{ m/s}^2$$

Find new expressions for position, velocity, and acceleration in SI units:

$$x = 0.0539 \cos(5.00t + 0.121\pi)$$

$$v = -0.269 \sin(5.00t + 0.121\pi)$$

$$a = -1.35 \cos(5.00t + 0.121\pi)$$

As we saw in Chapters 7 and 8, many problems are easier to solve using an energy approach rather than one based on variables of motion. This particular What If? is easier to solve from an energy approach. Therefore, we shall investigate the energy of the simple harmonic oscillator in the next section.

Example 15.2**Watch Out for Potholes!**

A car with a mass of 1 300 kg is constructed so that its frame is supported by four springs. Each spring has a force constant of 20 000 N/m. Two people riding in the car have a combined mass of 160 kg. Find the frequency of vibration of the car after it is driven over a pothole in the road.

continued

▶ 15.2 continued

SOLUTION

Conceptualize Think about your experiences with automobiles. When you sit in a car, it moves downward a small distance because your weight is compressing the springs further. If you push down on the front bumper and release it, the front of the car oscillates a few times.

Categorize We imagine the car as being supported by a single spring and model the car as a *particle in simple harmonic motion*.

Analyze First, let's determine the effective spring constant of the four springs combined. For a given extension x of the springs, the combined force on the car is the sum of the forces from the individual springs.

Find an expression for the total force on the car:

$$F_{\text{total}} = \sum (-kx) = -\left(\sum k\right)x$$

In this expression, x has been factored from the sum because it is the same for all four springs. The effective spring constant for the combined springs is the sum of the individual spring constants.

Evaluate the effective spring constant:

$$k_{\text{eff}} = \sum k = 4 \times 20\,000 \text{ N/m} = 80\,000 \text{ N/m}$$

Use Equation 15.14 to find the frequency of vibration:

$$f = \frac{1}{2\pi} \sqrt{\frac{k_{\text{eff}}}{m}} = \frac{1}{2\pi} \sqrt{\frac{80\,000 \text{ N/m}}{1\,460 \text{ kg}}} = 1.18 \text{ Hz}$$

Finalize The mass we used here is that of the car plus the people because that is the total mass that is oscillating. Also notice that we have explored only up-and-down motion of the car. If an oscillation is established in which the car rocks back and forth such that the front end goes up when the back end goes down, the frequency will be different.

WHAT IF? Suppose the car stops on the side of the road and the two people exit the car. One of them pushes downward on the car and releases it so that it oscillates vertically. Is the frequency of the oscillation the same as the value we just calculated?

Answer The suspension system of the car is the same, but the mass that is oscillating is smaller: it no longer includes the mass of the two people. Therefore, the frequency should be higher. Let's calculate the new frequency, taking the mass to be 1 300 kg:

$$f = \frac{1}{2\pi} \sqrt{\frac{k_{\text{eff}}}{m}} = \frac{1}{2\pi} \sqrt{\frac{80\,000 \text{ N/m}}{1\,300 \text{ kg}}} = 1.25 \text{ Hz}$$

As predicted, the new frequency is a bit higher.

15.3 Energy of the Simple Harmonic Oscillator

As we have done before, after studying the the motion of an object modeled as a particle in a new situation and investigating the forces involved in influencing that motion, we turn our attention to *energy*. Let us examine the mechanical energy of a system in which a particle undergoes simple harmonic motion, such as the block–spring system illustrated in Figure 15.1. Because the surface is frictionless, the system is isolated and we expect the total mechanical energy of the system to be constant. We assume a massless spring, so the kinetic energy of the system corresponds only to that of the block. We can use Equation 15.15 to express the kinetic energy of the block as

Kinetic energy of a simple harmonic oscillator ▶

$$K = \frac{1}{2}mv^2 = \frac{1}{2}m\omega^2 A^2 \sin^2(\omega t + \phi) \quad (15.19)$$

The elastic potential energy stored in the spring for any elongation x is given by $\frac{1}{2}kx^2$ (see Eq. 7.22). Using Equation 15.6 gives

Potential energy of a simple harmonic oscillator ▶

$$U = \frac{1}{2}kx^2 = \frac{1}{2}kA^2 \cos^2(\omega t + \phi) \quad (15.20)$$

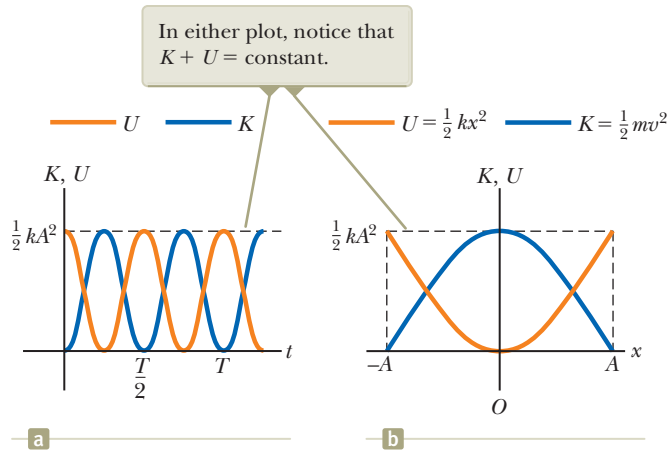


Figure 15.9 (a) Kinetic energy and potential energy versus time for a simple harmonic oscillator with $\phi = 0$. (b) Kinetic energy and potential energy versus position for a simple harmonic oscillator.

We see that K and U are *always* positive quantities or zero. Because $\omega^2 = k/m$, we can express the total mechanical energy of the simple harmonic oscillator as

$$E = K + U = \frac{1}{2}kA^2[\sin^2(\omega t + \phi) + \cos^2(\omega t + \phi)]$$

From the identity $\sin^2 \theta + \cos^2 \theta = 1$, we see that the quantity in square brackets is unity. Therefore, this equation reduces to

$$E = \frac{1}{2}kA^2 \quad (15.21)$$

◀ Total energy of a simple harmonic oscillator

That is, the total mechanical energy of a simple harmonic oscillator is a constant of the motion and is proportional to the square of the amplitude. The total mechanical energy is equal to the maximum potential energy stored in the spring when $x = \pm A$ because $v = 0$ at these points and there is no kinetic energy. At the equilibrium position, where $U = 0$ because $x = 0$, the total energy, all in the form of kinetic energy, is again $\frac{1}{2}kA^2$.

Plots of the kinetic and potential energies versus time appear in Figure 15.9a, where we have taken $\phi = 0$. At all times, the sum of the kinetic and potential energies is a constant equal to $\frac{1}{2}kA^2$, the total energy of the system.

The variations of K and U with the position x of the block are plotted in Figure 15.9b. Energy is continuously being transformed between potential energy stored in the spring and kinetic energy of the block.

Figure 15.10 on page 460 illustrates the position, velocity, acceleration, kinetic energy, and potential energy of the block–spring system for one full period of the motion. Most of the ideas discussed so far are incorporated in this important figure. Study it carefully.

Finally, we can obtain the velocity of the block at an arbitrary position by expressing the total energy of the system at some arbitrary position x as

$$E = K + U = \frac{1}{2}mv^2 + \frac{1}{2}kx^2 = \frac{1}{2}kA^2$$

$$v = \pm \sqrt{\frac{k}{m}(A^2 - x^2)} = \pm \omega \sqrt{A^2 - x^2} \quad (15.22)$$

◀ Velocity as a function of position for a simple harmonic oscillator

When you check Equation 15.22 to see whether it agrees with known cases, you find that it verifies that the speed is a maximum at $x = 0$ and is zero at the turning points $x = \pm A$.

You may wonder why we are spending so much time studying simple harmonic oscillators. We do so because they are good models of a wide variety of physical phenomena. For example, recall the Lennard–Jones potential discussed in Example 7.9. This complicated function describes the forces holding atoms together. Figure 15.11a on page 460 shows that for small displacements from the equilibrium

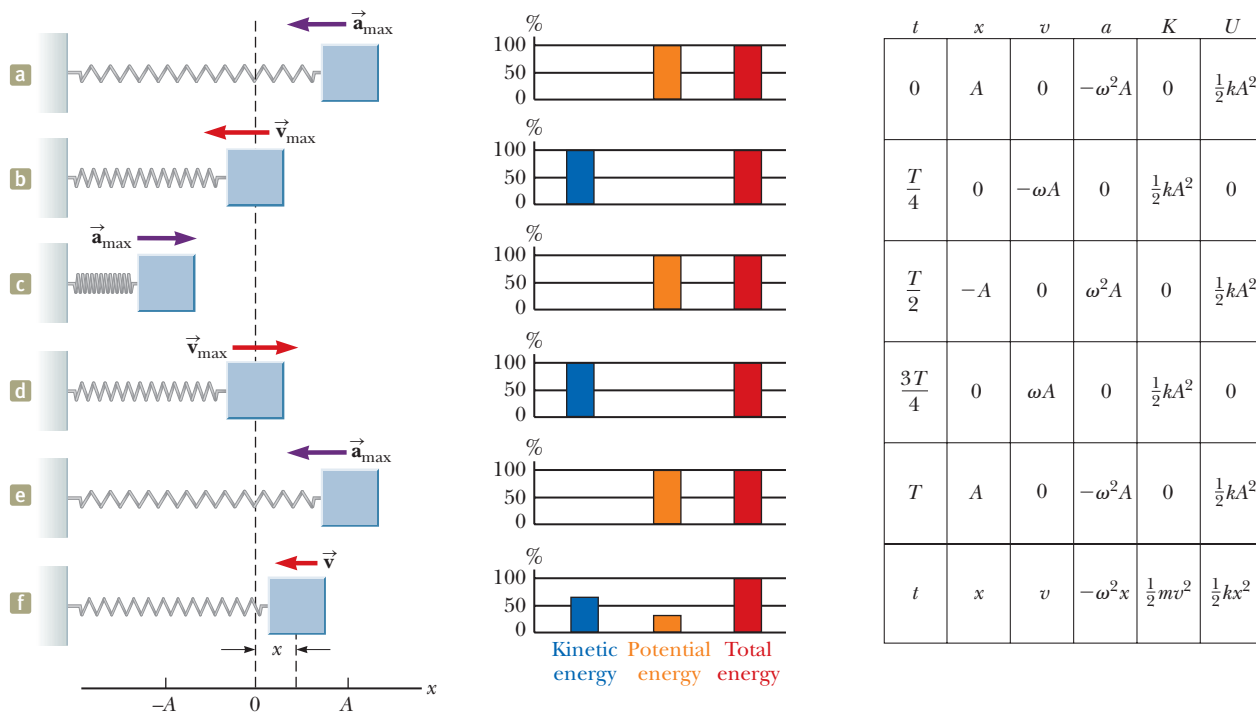
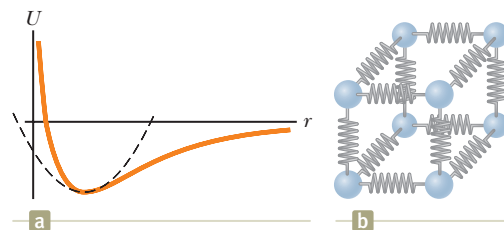


Figure 15.10 (a) through (e) Several instants in the simple harmonic motion for a block–spring system. Energy bar graphs show the distribution of the energy of the system at each instant. The parameters in the table at the right refer to the block–spring system, assuming at $t = 0$, $x = A$; hence, $x = A \cos \omega t$. For these five special instants, one of the types of energy is zero. (f) An arbitrary point in the motion of the oscillator. The system possesses both kinetic energy and potential energy at this instant as shown in the bar graph.

position, the potential energy curve for this function approximates a parabola, which represents the potential energy function for a simple harmonic oscillator. Therefore, we can model the complex atomic binding forces as being due to tiny springs as depicted in Figure 15.11b.

The ideas presented in this chapter apply not only to block–spring systems and atoms, but also to a wide range of situations that include bungee jumping, playing a musical instrument, and viewing the light emitted by a laser. You will see more examples of simple harmonic oscillators as you work through this book.

Figure 15.11 (a) If the atoms in a molecule do not move too far from their equilibrium positions, a graph of potential energy versus separation distance between atoms is similar to the graph of potential energy versus position for a simple harmonic oscillator (dashed black curve). (b) The forces between atoms in a solid can be modeled by imagining springs between neighboring atoms.



Example 15.3 Oscillations on a Horizontal Surface AM

A 0.500-kg cart connected to a light spring for which the force constant is 20.0 N/m oscillates on a frictionless, horizontal air track.

(A) Calculate the maximum speed of the cart if the amplitude of the motion is 3.00 cm.

SOLUTION

Conceptualize The system oscillates in exactly the same way as the block in Figure 15.10, so use that figure in your mental image of the motion.

15.3 continued

Categorize The cart is modeled as a *particle in simple harmonic motion*.

Analyze Use Equation 15.21 to express the total energy of the oscillator system and equate it to the kinetic energy of the system when the cart is at $x = 0$:

$$E = \frac{1}{2}kA^2 = \frac{1}{2}mv_{\max}^2$$

Solve for the maximum speed and substitute numerical values:

$$v_{\max} = \sqrt{\frac{k}{m}}A = \sqrt{\frac{20.0 \text{ N/m}}{0.500 \text{ kg}}}(0.030 \text{ m}) = 0.190 \text{ m/s}$$

(B) What is the velocity of the cart when the position is 2.00 cm?

SOLUTION

Use Equation 15.22 to evaluate the velocity:

$$\begin{aligned} v &= \pm \sqrt{\frac{k}{m}(A^2 - x^2)} \\ &= \pm \sqrt{\frac{20.0 \text{ N/m}}{0.500 \text{ kg}}[(0.030 \text{ m})^2 - (0.020 \text{ m})^2]} \\ &= \pm 0.141 \text{ m/s} \end{aligned}$$

The positive and negative signs indicate that the cart could be moving to either the right or the left at this instant.

(C) Compute the kinetic and potential energies of the system when the position of the cart is 2.00 cm.

SOLUTION

Use the result of part (B) to evaluate the kinetic energy at $x = 0.020 \text{ m}$:

$$K = \frac{1}{2}mv^2 = \frac{1}{2}(0.500 \text{ kg})(0.141 \text{ m/s})^2 = 5.00 \times 10^{-3} \text{ J}$$

Evaluate the elastic potential energy at $x = 0.020 \text{ m}$:

$$U = \frac{1}{2}kx^2 = \frac{1}{2}(20.0 \text{ N/m})(0.020 \text{ m})^2 = 4.00 \times 10^{-3} \text{ J}$$

Finalize The sum of the kinetic and potential energies in part (C) is equal to the total energy, which can be found from Equation 15.21. That must be true for *any* position of the cart.

WHAT IF? The cart in this example could have been set into motion by releasing the cart from rest at $x = 3.00 \text{ cm}$. What if the cart were released from the same position, but with an initial velocity of $v = -0.100 \text{ m/s}$? What are the new amplitude and maximum speed of the cart?

Answer This question is of the same type we asked at the end of Example 15.1, but here we apply an energy approach.

First calculate the total energy of the system at $t = 0$:

$$\begin{aligned} E &= \frac{1}{2}mv^2 + \frac{1}{2}kx^2 \\ &= \frac{1}{2}(0.500 \text{ kg})(-0.100 \text{ m/s})^2 + \frac{1}{2}(20.0 \text{ N/m})(0.030 \text{ m})^2 \\ &= 1.15 \times 10^{-2} \text{ J} \end{aligned}$$

Equate this total energy to the potential energy of the system when the cart is at the endpoint of the motion:

$$E = \frac{1}{2}kA^2$$

Solve for the amplitude A :

$$A = \sqrt{\frac{2E}{k}} = \sqrt{\frac{2(1.15 \times 10^{-2} \text{ J})}{20.0 \text{ N/m}}} = 0.0339 \text{ m}$$

Equate the total energy to the kinetic energy of the system when the cart is at the equilibrium position:

$$E = \frac{1}{2}mv_{\max}^2$$

Solve for the maximum speed:

$$v_{\max} = \sqrt{\frac{2E}{m}} = \sqrt{\frac{2(1.15 \times 10^{-2} \text{ J})}{0.500 \text{ kg}}} = 0.214 \text{ m/s}$$

The amplitude and maximum velocity are larger than the previous values because the cart was given an initial velocity at $t = 0$.



Figure 15.12 The bottom of a treadle-style sewing machine from the early twentieth century. The treadle is the wide, flat foot pedal with the metal grillwork.

15.4 Comparing Simple Harmonic Motion with Uniform Circular Motion

Some common devices in everyday life exhibit a relationship between oscillatory motion and circular motion. For example, consider the drive mechanism for a non-electric sewing machine in Figure 15.12. The operator of the machine places her feet on the treadle and rocks them back and forth. This oscillatory motion causes the large wheel at the right to undergo circular motion. The red drive belt seen in the photograph transfers this circular motion to the sewing machine mechanism (above the photo) and eventually results in the oscillatory motion of the sewing needle. In this section, we explore this interesting relationship between these two types of motion.

Figure 15.13 is a view of an experimental arrangement that shows this relationship. A ball is attached to the rim of a turntable of radius A , which is illuminated from above by a lamp. The ball casts a shadow on a screen. As the turntable rotates with constant angular speed, the shadow of the ball moves back and forth in simple harmonic motion.

Consider a particle located at point P on the circumference of a circle of radius A as in Figure 15.14a, with the line OP making an angle ϕ with the x axis at $t = 0$. We call this circle a *reference circle* for comparing simple harmonic motion with uniform circular motion, and we choose the position of P at $t = 0$ as our reference position. If the particle moves along the circle with constant angular speed ω until OP makes an angle θ with the x axis as in Figure 15.14b, at some time $t > 0$ the angle between OP and the x axis is $\theta = \omega t + \phi$. As the particle moves along the circle, the projection of P on the x axis, labeled point Q , moves back and forth along the x axis between the limits $x = \pm A$.

Notice that points P and Q always have the same x coordinate. From the right triangle OPQ , we see that this x coordinate is

$$x(t) = A \cos(\omega t + \phi) \quad (15.23)$$

This expression is the same as Equation 15.6 and shows that the point Q moves with simple harmonic motion along the x axis. Therefore, the motion of an object described by the analysis model of a particle in simple harmonic motion along a straight line can be represented by the projection of an object that can be modeled as a particle in uniform circular motion along a diameter of a reference circle.

This geometric interpretation shows that the time interval for one complete revolution of the point P on the reference circle is equal to the period of motion T for simple harmonic motion between $x = \pm A$. Therefore, the angular speed ω of P is the same as the angular frequency ω of simple harmonic motion along the x axis

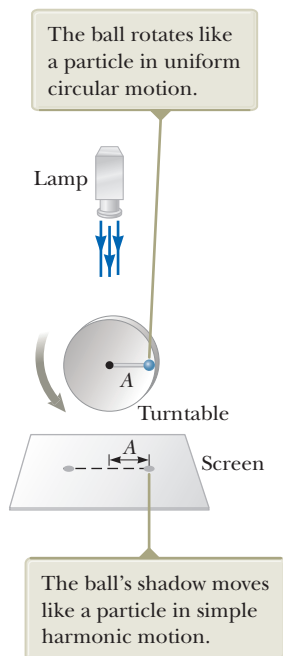


Figure 15.13 An experimental setup for demonstrating the connection between a particle in simple harmonic motion and a corresponding particle in uniform circular motion.

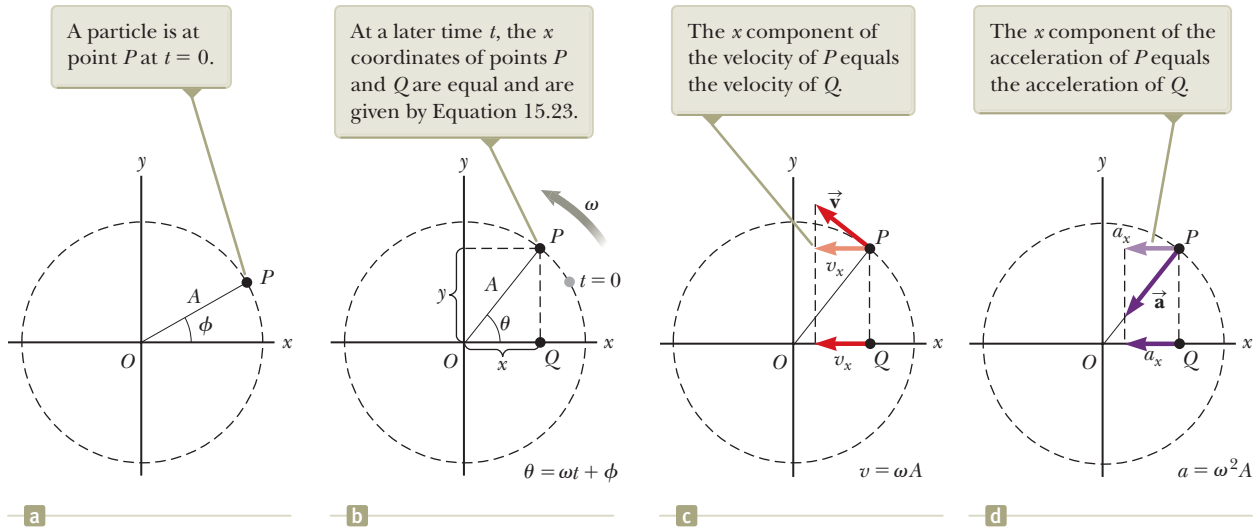


Figure 15.14 Relationship between the uniform circular motion of a point P and the simple harmonic motion of a point Q . A particle at P moves in a circle of radius A with constant angular speed ω .

(which is why we use the same symbol). The phase constant ϕ for simple harmonic motion corresponds to the initial angle OP makes with the x axis. The radius A of the reference circle equals the amplitude of the simple harmonic motion.

Because the relationship between linear and angular speed for circular motion is $v = r\omega$ (see Eq. 10.10), the particle moving on the reference circle of radius A has a velocity of magnitude ωA . From the geometry in Figure 15.14c, we see that the x component of this velocity is $-\omega A \sin(\omega t + \phi)$. By definition, point Q has a velocity given by dx/dt . Differentiating Equation 15.23 with respect to time, we find that the velocity of Q is the same as the x component of the velocity of P .

The acceleration of P on the reference circle is directed radially inward toward O and has a magnitude $v^2/A = \omega^2 A$. From the geometry in Figure 15.14d, we see that the x component of this acceleration is $-\omega^2 A \cos(\omega t + \phi)$. This value is also the acceleration of the projected point Q along the x axis, as you can verify by taking the second derivative of Equation 15.23.

- Quick Quiz 15.5** Figure 15.15 shows the position of an object in uniform circular motion at $t = 0$. A light shines from above and projects a shadow of the object on a screen below the circular motion. What are the correct values for the *amplitude* and *phase constant* (relative to an x axis to the right) of the simple harmonic motion of the shadow? (a) 0.50 m and 0 (b) 1.00 m and 0 (c) 0.50 m and π (d) 1.00 m and π

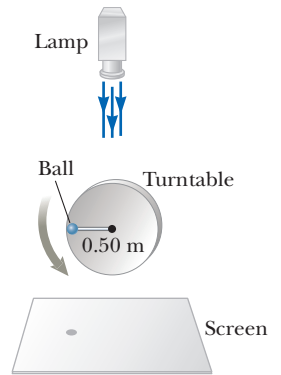


Figure 15.15 (Quick Quiz 15.5) An object moves in circular motion, casting a shadow on the screen below. Its position at an instant of time is shown.

Example 15.4 Circular Motion with Constant Angular Speed AM

The ball in Figure 15.13 rotates counterclockwise in a circle of radius 3.00 m with a constant angular speed of 8.00 rad/s. At $t = 0$, its shadow has an x coordinate of 2.00 m and is moving to the right.

(A) Determine the x coordinate of the shadow as a function of time in SI units.

SOLUTION

Conceptualize Be sure you understand the relationship between circular motion of the ball and simple harmonic motion of its shadow as described in Figure 15.13. Notice that the shadow is *not* at its maximum position at $t = 0$.

Categorize The ball on the turntable is a *particle in uniform circular motion*. The shadow is modeled as a *particle in simple harmonic motion*.

continued

15.4 continued

Analyze Use Equation 15.23 to write an expression for the x coordinate of the rotating ball:

$$x = A \cos(\omega t + \phi)$$

Solve for the phase constant:

$$\phi = \cos^{-1}\left(\frac{x}{A}\right) - \omega t$$

Substitute numerical values for the initial conditions:

$$\phi = \cos^{-1}\left(\frac{2.00 \text{ m}}{3.00 \text{ m}}\right) - 0 = \pm 48.2^\circ = \pm 0.841 \text{ rad}$$

If we were to take $\phi = +0.841$ rad as our answer, the shadow would be moving to the left at $t = 0$. Because the shadow is moving to the right at $t = 0$, we must choose $\phi = -0.841$ rad.

Write the x coordinate as a function of time:

$$x = 3.00 \cos(8.00t - 0.841)$$

(B) Find the x components of the shadow's velocity and acceleration at any time t .

SOLUTION

Differentiate the x coordinate with respect to time to find the velocity at any time in m/s:

$$\begin{aligned} v_x &= \frac{dx}{dt} = (-3.00 \text{ m})(8.00 \text{ rad/s}) \sin(8.00t - 0.841) \\ &= -24.0 \sin(8.00t - 0.841) \end{aligned}$$

Differentiate the velocity with respect to time to find the acceleration at any time in m/s^2 :

$$\begin{aligned} a_x &= \frac{dv_x}{dt} = (-24.0 \text{ m/s})(8.00 \text{ rad/s}) \cos(8.00t - 0.841) \\ &= -192 \cos(8.00t - 0.841) \end{aligned}$$

Finalize These results are equally valid for the ball moving in uniform circular motion and the shadow moving in simple harmonic motion. Notice that the value of the phase constant puts the ball in the fourth quadrant of the xy coordinate system of Figure 15.14, which is consistent with the shadow having a positive value for x and moving toward the right.

When θ is small, a simple pendulum's motion can be modeled as simple harmonic motion about the equilibrium position $\theta = 0$.

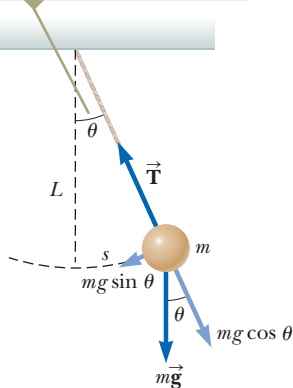


Figure 15.16 A simple pendulum.

15.5 The Pendulum

The **simple pendulum** is another mechanical system that exhibits periodic motion. It consists of a particle-like bob of mass m suspended by a light string of length L that is fixed at the upper end as shown in Figure 15.16. The motion occurs in the vertical plane and is driven by the gravitational force. We shall show that, provided the angle θ is small (less than about 10°), the motion is very close to that of a simple harmonic oscillator.

The forces acting on the bob are the force \vec{T} exerted by the string and the gravitational force $m\vec{g}$. The tangential component $mg \sin \theta$ of the gravitational force always acts toward $\theta = 0$, opposite the displacement of the bob from the lowest position. Therefore, the tangential component is a restoring force, and we can apply Newton's second law for motion in the tangential direction:

$$F_t = ma_t \rightarrow -mg \sin \theta = m \frac{d^2s}{dt^2}$$

where the negative sign indicates that the tangential force acts toward the equilibrium (vertical) position and s is the bob's position measured along the arc. We have expressed the tangential acceleration as the second derivative of the position s . Because $s = L\theta$ (Eq. 10.1a with $r = L$) and L is constant, this equation reduces to

$$\frac{d^2\theta}{dt^2} = -\frac{g}{L} \sin \theta$$

Considering θ as the position, let us compare this equation with Equation 15.3. Does it have the same mathematical form? No! The right side is proportional to $\sin \theta$ rather than to θ ; hence, we would not expect simple harmonic motion because this expression is not of the same mathematical form as Equation 15.3. If we assume θ is *small* (less than about 10° or 0.2 rad), however, we can use the **small angle approximation**, in which $\sin \theta \approx \theta$, where θ is measured in radians. Table 15.1 shows angles in degrees and radians and the sines of these angles. As long as θ is less than approximately 10° , the angle in radians and its sine are the same to within an accuracy of less than 1.0%.

Therefore, for small angles, the equation of motion becomes

$$\frac{d^2\theta}{dt^2} = -\frac{g}{L}\theta \quad (\text{for small values of } \theta) \quad (15.24)$$

Equation 15.24 has the same mathematical form as Equation 15.3, so we conclude that the motion for small amplitudes of oscillation can be modeled as simple harmonic motion. Therefore, the solution of Equation 15.24 is modeled after Equation 15.6 and is given by $\theta = \theta_{\max} \cos(\omega t + \phi)$, where θ_{\max} is the *maximum angular position* and the angular frequency ω is

$$\omega = \sqrt{\frac{g}{L}} \quad (15.25)$$

The period of the motion is

$$T = \frac{2\pi}{\omega} = 2\pi\sqrt{\frac{L}{g}} \quad (15.26)$$

In other words, the period and frequency of a simple pendulum depend only on the length of the string and the acceleration due to gravity. Because the period is independent of the mass, we conclude that all simple pendula that are of equal length and are at the same location (so that g is constant) oscillate with the same period.

The simple pendulum can be used as a timekeeper because its period depends only on its length and the local value of g . It is also a convenient device for making precise measurements of the free-fall acceleration. Such measurements are important because variations in local values of g can provide information on the location of oil and other valuable underground resources.

- Quick Quiz 15.6** A grandfather clock depends on the period of a pendulum to keep correct time. (i) Suppose a grandfather clock is calibrated correctly and then a mischievous child slides the bob of the pendulum downward on the oscillating rod. Does the grandfather clock run (a) slow, (b) fast, or (c) correctly? (ii) Suppose a grandfather clock is calibrated correctly at sea level and is then taken to the top of a very tall mountain. Does the grandfather clock now run (a) slow, (b) fast, or (c) correctly?

Pitfall Prevention 15.5

Not True Simple Harmonic Motion

The pendulum *does not* exhibit true simple harmonic motion for *any* angle. If the angle is less than about 10° , the motion is close to and can be *modeled* as simple harmonic.

◀ Angular frequency for a simple pendulum

◀ Period of a simple pendulum

Table 15.1 Angles and Sines of Angles

Angle in Degrees	Angle in Radians	Sine of Angle	Percent Difference
0°	0.000 0	0.000 0	0.0%
1°	0.017 5	0.017 5	0.0%
2°	0.034 9	0.034 9	0.0%
3°	0.052 4	0.052 3	0.0%
5°	0.087 3	0.087 2	0.1%
10°	0.174 5	0.173 6	0.5%
15°	0.261 8	0.258 8	1.2%
20°	0.349 1	0.342 0	2.1%
30°	0.523 6	0.500 0	4.7%

Example 15.5 A Connection Between Length and Time

Christian Huygens (1629–1695), the greatest clockmaker in history, suggested that an international unit of length could be defined as the length of a simple pendulum having a period of exactly 1 s. How much shorter would our length unit be if his suggestion had been followed?

SOLUTION

Conceptualize Imagine a pendulum that swings back and forth in exactly 1 second. Based on your experience in observing swinging objects, can you make an estimate of the required length? Hang a small object from a string and simulate the 1-s pendulum.

Categorize This example involves a simple pendulum, so we categorize it as a substitution problem that applies the concepts introduced in this section.

Solve Equation 15.26 for the length and substitute the known values:

$$L = \frac{T^2 g}{4\pi^2} = \frac{(1.00 \text{ s})^2 (9.80 \text{ m/s}^2)}{4\pi^2} = 0.248 \text{ m}$$

The meter's length would be slightly less than one-fourth of its current length. Also, the number of significant digits depends only on how precisely we know g because the time has been defined to be exactly 1 s.

WHAT IF? What if Huygens had been born on another planet? What would the value for g have to be on that planet such that the meter based on Huygens's pendulum would have the same value as our meter?

Answer Solve Equation 15.26 for g :

$$g = \frac{4\pi^2 L}{T^2} = \frac{4\pi^2 (1.00 \text{ m})}{(1.00 \text{ s})^2} = 4\pi^2 \text{ m/s}^2 = 39.5 \text{ m/s}^2$$

No planet in our solar system has an acceleration due to gravity that large.

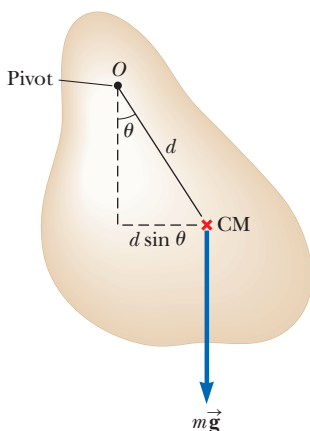


Figure 15.17 A physical pendulum pivoted at O .

Physical Pendulum

Suppose you balance a wire coat hanger so that the hook is supported by your extended index finger. When you give the hanger a small angular displacement with your other hand and then release it, it oscillates. If a hanging object oscillates about a fixed axis that does not pass through its center of mass and the object cannot be approximated as a point mass, we cannot treat the system as a simple pendulum. In this case, the system is called a **physical pendulum**.

Consider a rigid object pivoted at a point O that is a distance d from the center of mass (Fig. 15.17). The gravitational force provides a torque about an axis through O , and the magnitude of that torque is $mgd \sin \theta$, where θ is as shown in Figure 15.17. We apply the rigid object under a net torque analysis model to the object and use the rotational form of Newton's second law, $\Sigma \tau_{\text{ext}} = I\alpha$, where I is the moment of inertia of the object about the axis through O . The result is

$$-mgd \sin \theta = I \frac{d^2\theta}{dt^2}$$

The negative sign indicates that the torque about O tends to decrease θ . That is, the gravitational force produces a restoring torque. If we again assume θ is small, the approximation $\sin \theta \approx \theta$ is valid and the equation of motion reduces to

$$\frac{d^2\theta}{dt^2} = -\left(\frac{mgd}{I}\right)\theta = -\omega^2\theta \quad (15.27)$$

Because this equation is of the same mathematical form as Equation 15.3, its solution is modeled after that of the simple harmonic oscillator. That is, the solution

of Equation 15.27 is given by $\theta = \theta_{\max} \cos(\omega t + \phi)$, where θ_{\max} is the maximum angular position and

$$\omega = \sqrt{\frac{mgd}{I}}$$

The period is

$$T = \frac{2\pi}{\omega} = 2\pi\sqrt{\frac{I}{mgd}} \quad (15.28)$$

◀ Period of a physical pendulum

This result can be used to measure the moment of inertia of a flat, rigid object. If the location of the center of mass—and hence the value of d —is known, the moment of inertia can be obtained by measuring the period. Finally, notice that Equation 15.28 reduces to the period of a simple pendulum (Eq. 15.26) when $I = md^2$, that is, when all the mass is concentrated at the center of mass.

Example 15.6 A Swinging Rod

A uniform rod of mass M and length L is pivoted about one end and oscillates in a vertical plane (Fig. 15.18). Find the period of oscillation if the amplitude of the motion is small.

SOLUTION

Conceptualize Imagine a rod swinging back and forth when pivoted at one end. Try it with a meterstick or a scrap piece of wood.

Categorize Because the rod is not a point particle, we categorize it as a physical pendulum.

Analyze In Chapter 10, we found that the moment of inertia of a uniform rod about an axis through one end is $\frac{1}{3}ML^2$. The distance d from the pivot to the center of mass of the rod is $L/2$.

Substitute these quantities into Equation 15.28:

$$T = 2\pi\sqrt{\frac{\frac{1}{3}ML^2}{Mg(L/2)}} = 2\pi\sqrt{\frac{2L}{3g}}$$

Finalize In one of the Moon landings, an astronaut walking on the Moon's surface had a belt hanging from his space suit, and the belt oscillated as a physical pendulum. A scientist on the Earth observed this motion on television and used it to estimate the free-fall acceleration on the Moon. How did the scientist make this calculation?

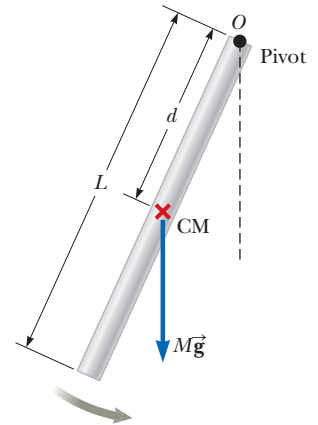


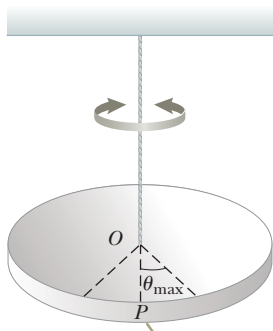
Figure 15.18 (Example 15.6) A rigid rod oscillating about a pivot through one end is a physical pendulum with $d = L/2$.

Torsional Pendulum

Figure 15.19 on page 468 shows a rigid object such as a disk suspended by a wire attached at the top to a fixed support. When the object is twisted through some angle θ , the twisted wire exerts on the object a restoring torque that is proportional to the angular position. That is,

$$\tau = -\kappa\theta$$

where κ (Greek letter kappa) is called the *torsion constant* of the support wire and is a rotational analog to the force constant k for a spring. The value of κ can be obtained by applying a known torque to twist the wire through a measurable angle θ . Applying Newton's second law for rotational motion, we find that



The object oscillates about the line OP with an amplitude θ_{\max} .

Figure 15.19 A torsional pendulum.

$$\sum \tau = I\alpha \rightarrow -\kappa\theta = I \frac{d^2\theta}{dt^2}$$

$$\frac{d^2\theta}{dt^2} = -\frac{\kappa}{I}\theta \quad (15.29)$$

Again, this result is the equation of motion for a simple harmonic oscillator, with $\omega = \sqrt{\kappa/I}$ and a period

$$T = 2\pi\sqrt{\frac{I}{\kappa}} \quad (15.30)$$

This system is called a *torsional pendulum*. There is no small-angle restriction in this situation as long as the elastic limit of the wire is not exceeded.

15.6 Damped Oscillations

The oscillatory motions we have considered so far have been for ideal systems, that is, systems that oscillate indefinitely under the action of only one force, a linear restoring force. In many real systems, nonconservative forces such as friction or air resistance also act and retard the motion of the system. Consequently, the mechanical energy of the system diminishes in time, and the motion is said to be *damped*. The mechanical energy of the system is transformed into internal energy in the object and the retarding medium. Figure 15.20 depicts one such system: an object attached to a spring and submerged in a viscous liquid. Another example is a simple pendulum oscillating in air. After being set into motion, the pendulum eventually stops oscillating due to air resistance. The opening photograph for this chapter depicts damped oscillations in practice. The spring-loaded devices mounted below the bridge are dampers that transform mechanical energy of the oscillating bridge into internal energy.

One common type of retarding force is that discussed in Section 6.4, where the force is proportional to the speed of the moving object and acts in the direction opposite the velocity of the object with respect to the medium. This retarding force is often observed when an object moves through air, for instance. Because the retarding force can be expressed as $\vec{R} = -b\vec{v}$ (where b is a constant called the *damping coefficient*) and the restoring force of the system is $-kx$, we can write Newton's second law as

$$\begin{aligned} \sum F_x &= -kx - bv_x = ma_x \\ -kx - b \frac{dx}{dt} &= m \frac{d^2x}{dt^2} \end{aligned} \quad (15.31)$$

The solution to this equation requires mathematics that may be unfamiliar to you; we simply state it here without proof. When the retarding force is small compared with the maximum restoring force—that is, when the damping coefficient b is small—the solution to Equation 15.31 is

$$x = Ae^{-(b/2m)t} \cos(\omega t + \phi) \quad (15.32)$$

where the angular frequency of oscillation is

$$\omega = \sqrt{\frac{k}{m} - \left(\frac{b}{2m}\right)^2} \quad (15.33)$$

This result can be verified by substituting Equation 15.32 into Equation 15.31. It is convenient to express the angular frequency of a damped oscillator in the form

$$\omega = \sqrt{\omega_0^2 - \left(\frac{b}{2m}\right)^2}$$

where $\omega_0 = \sqrt{k/m}$ represents the angular frequency in the absence of a retarding force (the undamped oscillator) and is called the **natural frequency** of the system.

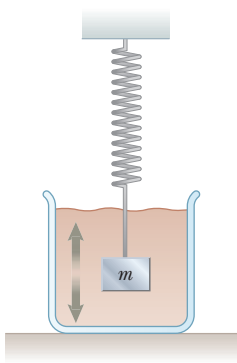


Figure 15.20 One example of a damped oscillator is an object attached to a spring and submerged in a viscous liquid.

Figure 15.21 shows the position as a function of time for an object oscillating in the presence of a retarding force. When the retarding force is small, the oscillatory character of the motion is preserved but the amplitude decreases exponentially in time, with the result that the motion ultimately becomes undetectable. Any system that behaves in this way is known as a **damped oscillator**. The dashed black lines in Figure 15.21, which define the *envelope* of the oscillatory curve, represent the exponential factor in Equation 15.32. This envelope shows that the amplitude decays exponentially with time. For motion with a given spring constant and object mass, the oscillations dampen more rapidly for larger values of the retarding force.

When the magnitude of the retarding force is small such that $b/2m < \omega_0$, the system is said to be **underdamped**. The resulting motion is represented by Figure 15.21 and the blue curve in Figure 15.22. As the value of b increases, the amplitude of the oscillations decreases more and more rapidly. When b reaches a critical value b_c such that $b_c/2m = \omega_0$, the system does not oscillate and is said to be **critically damped**. In this case, the system, once released from rest at some nonequilibrium position, approaches but does not pass through the equilibrium position. The graph of position versus time for this case is the red curve in Figure 15.22.

If the medium is so viscous that the retarding force is large compared with the restoring force—that is, if $b/2m > \omega_0$ —the system is **overdamped**. Again, the displaced system, when free to move, does not oscillate but rather simply returns to its equilibrium position. As the damping increases, the time interval required for the system to approach equilibrium also increases as indicated by the black curve in Figure 15.22. For critically damped and overdamped systems, there is no angular frequency ω and the solution in Equation 15.32 is not valid.

15.7 Forced Oscillations

We have seen that the mechanical energy of a damped oscillator decreases in time as a result of the retarding force. It is possible to compensate for this energy decrease by applying a periodic external force that does positive work on the system. At any instant, energy can be transferred into the system by an applied force that acts in the direction of motion of the oscillator. For example, a child on a swing can be kept in motion by appropriately timed “pushes.” The amplitude of motion remains constant if the energy input per cycle of motion exactly equals the decrease in mechanical energy in each cycle that results from retarding forces.

A common example of a forced oscillator is a damped oscillator driven by an external force that varies periodically, such as $F(t) = F_0 \sin \omega t$, where F_0 is a constant and ω is the angular frequency of the driving force. In general, the frequency ω of the driving force is variable, whereas the natural frequency ω_0 of the oscillator is fixed by the values of k and m . Modeling an oscillator with both retarding and driving forces as a particle under a net force, Newton’s second law in this situation gives

$$\sum F_x = ma_x \rightarrow F_0 \sin \omega t - b \frac{dx}{dt} - kx = m \frac{d^2x}{dt^2} \quad (15.34)$$

Again, the solution of this equation is rather lengthy and will not be presented. After the driving force on an initially stationary object begins to act, the amplitude of the oscillation will increase. The system of the oscillator and the surrounding medium is a nonisolated system: work is done by the driving force, such that the vibrational energy of the system (kinetic energy of the object, elastic potential energy in the spring) and internal energy of the object and the medium increase. After a sufficiently long period of time, when the energy input per cycle from the driving force equals the amount of mechanical energy transformed to internal energy for each cycle, a steady-state condition is reached in which the oscillations proceed with constant amplitude. In this situation, the solution of Equation 15.34 is

$$x = A \cos (\omega t + \phi) \quad (15.35)$$

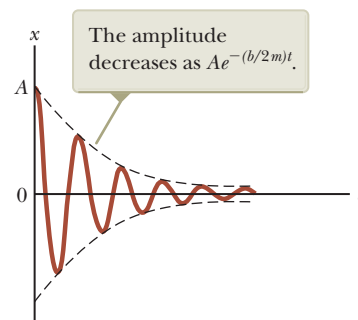


Figure 15.21 Graph of position versus time for a damped oscillator.

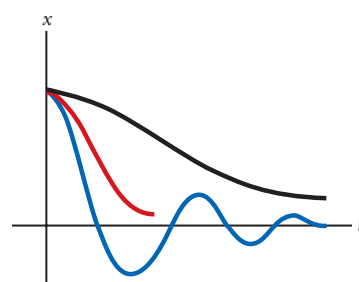


Figure 15.22 Graphs of position versus time for an underdamped oscillator (blue curve), a critically damped oscillator (red curve), and an overdamped oscillator (black curve).

Amplitude of a driven oscillator

When the frequency ω of the driving force equals the natural frequency ω_0 of the oscillator, resonance occurs.

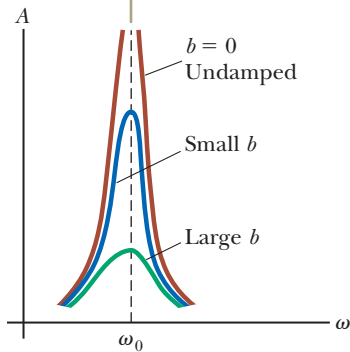


Figure 15.23 Graph of amplitude versus frequency for a damped oscillator when a periodic driving force is present. Notice that the shape of the resonance curve depends on the size of the damping coefficient b .

where

$$A = \frac{F_0/m}{\sqrt{(\omega^2 - \omega_0^2)^2 + \left(\frac{b\omega}{m}\right)^2}} \quad (15.36)$$

and where $\omega_0 = \sqrt{k/m}$ is the natural frequency of the undamped oscillator ($b = 0$).


Equations 15.35 and 15.36 show that the forced oscillator vibrates at the frequency of the driving force and that the amplitude of the oscillator is constant for a given driving force because it is being driven in steady-state by an external force. For small damping, the amplitude is large when the frequency of the driving force is near the natural frequency of oscillation, or when $\omega \approx \omega_0$. The dramatic increase in amplitude near the natural frequency is called **resonance**, and the natural frequency ω_0 is also called the **resonance frequency** of the system.

The reason for large-amplitude oscillations at the resonance frequency is that energy is being transferred to the system under the most favorable conditions. We can better understand this concept by taking the first time derivative of x in Equation 15.35, which gives an expression for the velocity of the oscillator. We find that v is proportional to $\sin(\omega t + \phi)$, which is the same trigonometric function as that describing the driving force. Therefore, the applied force \vec{F} is in phase with the velocity. The rate at which work is done on the oscillator by \vec{F} equals the dot product $\vec{F} \cdot \vec{v}$; this rate is the power delivered to the oscillator. Because the product $\vec{F} \cdot \vec{v}$ is a maximum when \vec{F} and \vec{v} are in phase, we conclude that at resonance, the applied force is in phase with the velocity and the power transferred to the oscillator is a maximum.

Figure 15.23 is a graph of amplitude as a function of driving frequency for a forced oscillator with and without damping. Notice that the amplitude increases with decreasing damping ($b \rightarrow 0$) and that the resonance curve broadens as the damping increases. In the absence of a damping force ($b = 0$), we see from Equation 15.36 that the steady-state amplitude approaches infinity as ω approaches ω_0 . In other words, if there are no losses in the system and we continue to drive an initially motionless oscillator with a periodic force that is in phase with the velocity, the amplitude of motion builds without limit (see the red-brown curve in Fig. 15.23). This limitless building does not occur in practice because some damping is always present in reality.

Later in this book we shall see that resonance appears in other areas of physics. For example, certain electric circuits have natural frequencies and can be set into strong resonance by a varying voltage applied at a given frequency. A bridge has natural frequencies that can be set into resonance by an appropriate driving force. A dramatic example of such resonance occurred in 1940 when the Tacoma Narrows Bridge in the state of Washington was destroyed by resonant vibrations. Although the winds were not particularly strong on that occasion, the “flapping” of the wind across the roadway (think of the “flapping” of a flag in a strong wind) provided a periodic driving force whose frequency matched that of the bridge. The resulting oscillations of the bridge caused it to ultimately collapse (Fig. 15.24) because the bridge design had inadequate built-in safety features.

Figure 15.24 (a) In 1940, turbulent winds set up torsional vibrations in the Tacoma Narrows Bridge, causing it to oscillate at a frequency near one of the natural frequencies of the bridge structure. (b) Once established, this resonance condition led to the bridge’s collapse. (Mathematicians and physicists are currently challenging some aspects of this interpretation.)



Many other examples of resonant vibrations can be cited. A resonant vibration you may have experienced is the “singing” of telephone wires in the wind. Machines often break if one vibrating part is in resonance with some other moving part. Soldiers marching in cadence across a bridge have been known to set up resonant vibrations in the structure and thereby cause it to collapse. Whenever any real physical system is driven near its resonance frequency, you can expect oscillations of very large amplitudes.

Summary

Concepts and Principles

The kinetic energy and potential energy for an object of mass m oscillating at the end of a spring of force constant k vary with time and are given by

$$K = \frac{1}{2}mv^2 = \frac{1}{2}m\omega^2 A^2 \sin^2(\omega t + \phi) \quad (15.19)$$

$$U = \frac{1}{2}kx^2 = \frac{1}{2}kA^2 \cos^2(\omega t + \phi) \quad (15.20)$$

The total energy of a simple harmonic oscillator is a constant of the motion and is given by

$$E = \frac{1}{2}kA^2 \quad (15.21)$$

A **simple pendulum** of length L can be modeled to move in simple harmonic motion for small angular displacements from the vertical. Its period is

$$T = 2\pi\sqrt{\frac{L}{g}} \quad (15.26)$$

A **physical pendulum** is an extended object that, for small angular displacements, can be modeled to move in simple harmonic motion about a pivot that does not go through the center of mass. The period of this motion is

$$T = 2\pi\sqrt{\frac{I}{mgd}} \quad (15.28)$$

where I is the moment of inertia of the object about an axis through the pivot and d is the distance from the pivot to the center of mass of the object.

If an oscillator experiences a damping force $\vec{\mathbf{R}} = -b\vec{\mathbf{v}}$, its position for small damping is described by

$$x = Ae^{-(b/2m)t} \cos(\omega t + \phi) \quad (15.32)$$

where

$$\omega = \sqrt{\frac{k}{m} - \left(\frac{b}{2m}\right)^2} \quad (15.33)$$

If an oscillator is subject to a sinusoidal driving force that is described by $F(t) = F_0 \sin \omega t$, it exhibits **resonance**, in which the amplitude is largest when the driving frequency ω matches the natural frequency $\omega_0 = \sqrt{k/m}$ of the oscillator.

Analysis Model for Problem Solving

Particle in Simple Harmonic Motion If a particle is subject to a force of the form of Hooke’s law $F = -kx$, the particle exhibits **simple harmonic motion**. Its position is described by

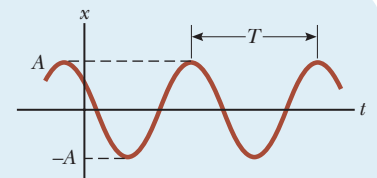
$$x(t) = A \cos(\omega t + \phi) \quad (15.6)$$

where A is the **amplitude** of the motion, ω is the **angular frequency**, and ϕ is the **phase constant**. The value of ϕ depends on the initial position and initial velocity of the particle.

The **period** of the oscillation of the particle is

$$T = \frac{2\pi}{\omega} = 2\pi\sqrt{\frac{m}{k}} \quad (15.13)$$

and the inverse of the period is the **frequency**.



Objective Questions

1. denotes answer available in *Student Solutions Manual/Study Guide*

- If a simple pendulum oscillates with small amplitude and its length is doubled, what happens to the frequency of its motion? (a) It doubles. (b) It becomes $\sqrt{2}$ times as large. (c) It becomes half as large. (d) It becomes $1/\sqrt{2}$ times as large. (e) It remains the same.
 - You attach a block to the bottom end of a spring hanging vertically. You slowly let the block move down and find that it hangs at rest with the spring stretched by 15.0 cm. Next, you lift the block back up to the initial position and release it from rest with the spring unstretched. What maximum distance does it move down? (a) 7.5 cm (b) 15.0 cm (c) 30.0 cm (d) 60.0 cm (e) The distance cannot be determined without knowing the mass and spring constant.
 - A block–spring system vibrating on a frictionless, horizontal surface with an amplitude of 6.0 cm has an energy of 12 J. If the block is replaced by one whose mass is twice the mass of the original block and the amplitude of the motion is again 6.0 cm, what is the energy of the system? (a) 12 J (b) 24 J (c) 6 J (d) 48 J (e) none of those answers
 - An object–spring system moving with simple harmonic motion has an amplitude A . When the kinetic energy of the object equals twice the potential energy stored in the spring, what is the position x of the object? (a) A (b) $\frac{1}{3}A$ (c) $A/\sqrt{3}$ (d) 0 (e) none of those answers
 - An object of mass 0.40 kg, hanging from a spring with a spring constant of 8.0 N/m, is set into an up-and-down simple harmonic motion. What is the magnitude of the acceleration of the object when it is at its maximum displacement of 0.10 m? (a) zero (b) 0.45 m/s^2 (c) 1.0 m/s^2 (d) 2.0 m/s^2 (e) 2.4 m/s^2
 - A runaway railroad car, with mass $3.0 \times 10^5 \text{ kg}$, coasts across a level track at 2.0 m/s when it collides elastically with a spring-loaded bumper at the end of the track. If the spring constant of the bumper is $2.0 \times 10^6 \text{ N/m}$, what is the maximum compression of the spring during the collision? (a) 0.77 m (b) 0.58 m (c) 0.34 m (d) 1.07 m (e) 1.24 m
 - The position of an object moving with simple harmonic motion is given by $x = 4 \cos(6\pi t)$, where x is in meters and t is in seconds. What is the period of the oscillating system? (a) 4 s (b) $\frac{1}{6}$ s (c) $\frac{1}{3}$ s (d) 6π s (e) impossible to determine from the information given
 - If an object of mass m attached to a light spring is replaced by one of mass $9m$, the frequency of the vibrating system changes by what factor? (a) $\frac{1}{9}$ (b) $\frac{1}{3}$ (c) 3.0 (d) 9.0 (e) 6.0
 - You stand on the end of a diving board and bounce to set it into oscillation. You find a maximum response in terms of the amplitude of oscillation of the end of the board when you bounce at frequency f . You now move to the middle of the board and repeat the experiment. Is the resonance frequency for forced oscillations at this point (a) higher, (b) lower, or (c) the same as f ?
 - A mass–spring system moves with simple harmonic motion along the x axis between turning points at $x_1 = 20 \text{ cm}$ and $x_2 = 60 \text{ cm}$. For parts (i) through (iii), choose from the same five possibilities. (i) At which position does the particle have the greatest magnitude of momentum? (a) 20 cm (b) 30 cm (c) 40 cm (d) some other position (e) The greatest value occurs at multiple points. (ii) At which position does the particle have greatest kinetic energy? (iii) At which position does the particle–spring system have the greatest total energy?
 - A block with mass $m = 0.1 \text{ kg}$ oscillates with amplitude $A = 0.1 \text{ m}$ at the end of a spring with force constant $k = 10 \text{ N/m}$ on a frictionless, horizontal surface. Rank the periods of the following situations from greatest to smallest. If any periods are equal, show their equality in your ranking. (a) The system is as described above. (b) The system is as described in situation (a) except the amplitude is 0.2 m. (c) The situation is as described in situation (a) except the mass is 0.2 kg. (d) The situation is as described in situation (a) except the spring has force constant 20 N/m. (e) A small resistive force makes the motion underdamped.
- 12.** For a simple harmonic oscillator, answer yes or no to the following questions. (a) Can the quantities position and velocity have the same sign? (b) Can velocity and acceleration have the same sign? (c) Can position and acceleration have the same sign?

- The top end of a spring is held fixed. A block is hung on the bottom end as in Figure OQ15.13a, and the frequency f of the oscillation of the system is measured. The block, a second identical block, and the spring are carried up in a space shuttle to Earth orbit. The two blocks are attached to the ends of the spring. The spring is compressed without making adjacent coils touch (Fig. OQ15.13b), and the system is released to oscillate while floating within the shuttle cabin (Fig. OQ15.13c). What is the frequency of oscillation for this system in terms of f ? (a) $f/2$ (b) $f/\sqrt{2}$ (c) f (d) $\sqrt{2}f$ (e) $2f$

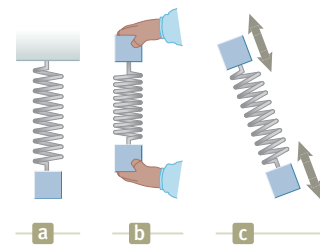


Figure OQ15.13

- Which of the following statements is *not* true regarding a mass–spring system that moves with simple harmonic motion in the absence of friction? (a) The total energy of the system remains constant. (b) The energy of the system is continually transformed between kinetic and potential energy. (c) The total energy of the system is proportional to the square of the amplitude. (d) The potential energy stored in the system is greatest when the mass passes through the equilibrium position. (e) The velocity of the oscillating mass has its maximum value when the mass passes through the equilibrium position.

15. A simple pendulum has a period of 2.5 s. (i) What is its period if its length is made four times larger? (a) 1.25 s (b) 1.77 s (c) 2.5 s (d) 3.54 s (e) 5 s (ii) What is its period if the length is held constant at its initial value and the mass of the suspended bob is made four times larger? Choose from the same possibilities.
16. A simple pendulum is suspended from the ceiling of a stationary elevator, and the period is determined. (i) When the elevator accelerates upward, is the period (a) greater, (b) smaller, or (c) unchanged? (ii) When the elevator has a downward acceleration, is the period (a) greater, (b) smaller, or (c) unchanged? (iii) When the elevator moves with constant upward velocity, is

the period of the pendulum (a) greater, (b) smaller, or (c) unchanged?

17. A particle on a spring moves in simple harmonic motion along the x axis between turning points at $x_1 = 100$ cm and $x_2 = 140$ cm. (i) At which of the following positions does the particle have maximum speed? (a) 100 cm (b) 110 cm (c) 120 cm (d) at none of those positions (ii) At which position does it have maximum acceleration? Choose from the same possibilities as in part (i). (iii) At which position is the greatest net force exerted on the particle? Choose from the same possibilities as in part (i).

Conceptual Questions

1. denotes answer available in *Student Solutions Manual/Study Guide*

1. You are looking at a small, leafy tree. You do not notice any breeze, and most of the leaves on the tree are motionless. One leaf, however, is fluttering back and forth wildly. After a while, that leaf stops moving and you notice a different leaf moving much more than all the others. Explain what could cause the large motion of one particular leaf.
2. The equations listed together on page 38 give position as a function of time, velocity as a function of time, and velocity as a function of position for an object moving in a straight line with constant acceleration. The quantity v_{xi} appears in every equation. (a) Do any of these equations apply to an object moving in a straight line with simple harmonic motion? (b) Using a similar format, make a table of equations describing simple harmonic motion. Include equations giving acceleration as a function of time and acceleration as a function of position. State the equations in such a form that they apply equally to a block–spring system, to a pendulum, and to other vibrating systems. (c) What quantity appears in every equation?
3. (a) If the coordinate of a particle varies as $x = -A \cos \omega t$, what is the phase constant in Equation 15.6? (b) At what position is the particle at $t = 0$?
4. A pendulum bob is made from a sphere filled with water. What would happen to the frequency of vibration of this pendulum if there were a hole in the sphere that allowed the water to leak out slowly?
5. Figure CQ15.5 shows graphs of the potential energy of four different systems versus the position of a particle

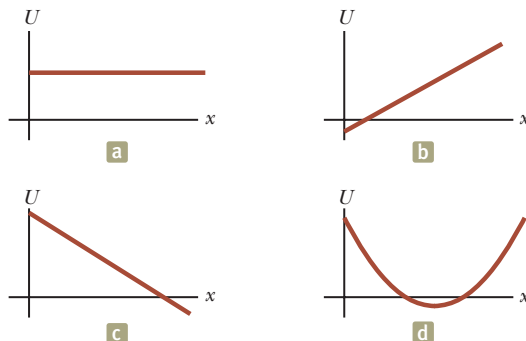


Figure CQ15.5

- in each system. Each particle is set into motion with a push at an arbitrarily chosen location. Describe its subsequent motion in each case (a), (b), (c), and (d).
6. A student thinks that any real vibration must be damped. Is the student correct? If so, give convincing reasoning. If not, give an example of a real vibration that keeps constant amplitude forever if the system is isolated.
7. The mechanical energy of an undamped block–spring system is constant as kinetic energy transforms to elastic potential energy and vice versa. For comparison, explain what happens to the energy of a damped oscillator in terms of the mechanical, potential, and kinetic energies.
8. Is it possible to have damped oscillations when a system is at resonance? Explain.
9. Will damped oscillations occur for any values of b and k ? Explain.
10. If a pendulum clock keeps perfect time at the base of a mountain, will it also keep perfect time when it is moved to the top of the mountain? Explain.
11. Is a bouncing ball an example of simple harmonic motion? Is the daily movement of a student from home to school and back simple harmonic motion? Why or why not?
12. A simple pendulum can be modeled as exhibiting simple harmonic motion when θ is small. Is the motion periodic when θ is large?
13. Consider the simplified single-piston engine in Figure CQ15.13. Assuming the wheel rotates with constant angular speed, explain why the piston rod oscillates in simple harmonic motion.

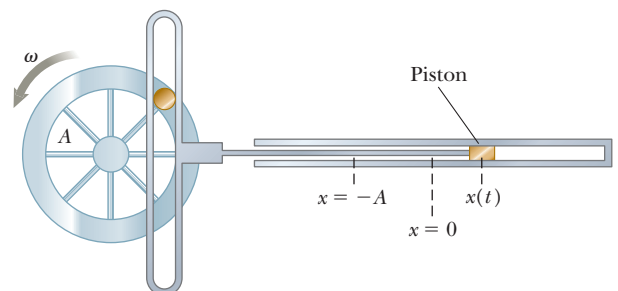


Figure CQ15.13

Problems



The problems found in this chapter may be assigned online in Enhanced WebAssign

1. straightforward; 2. intermediate; 3. challenging

1. full solution available in the *Student Solutions Manual/Study Guide*

AMT Analysis Model tutorial available in Enhanced WebAssign

GP Guided Problem

M Master It tutorial available in Enhanced WebAssign

W Watch It video solution available in Enhanced WebAssign

Note: Ignore the mass of every spring, except in Problems 76 and 87.

Section 15.1 Motion of an Object Attached to a Spring

Problems 17, 18, 19, 22, and 59 in Chapter 7 can also be assigned with this section.

- A 0.60-kg block attached to a spring with force constant 130 N/m is free to move on a frictionless, horizontal surface as in Figure 15.1. The block is released from rest when the spring is stretched 0.13 m. At the instant the block is released, find (a) the force on the block and (b) its acceleration.
- When a 4.25-kg object is placed on top of a vertical spring, the spring compresses a distance of 2.62 cm. What is the force constant of the spring?

Section 15.2 Analysis Model: Particle in Simple Harmonic Motion

- A vertical spring stretches 3.9 cm when a 10-g object is hung from it. The object is replaced with a block of mass 25 g that oscillates up and down in simple harmonic motion. Calculate the period of motion.
- In an engine, a piston oscillates with simple harmonic motion so that its position varies according to the expression

$$x = 5.00 \cos\left(2t + \frac{\pi}{6}\right)$$

where x is in centimeters and t is in seconds. At $t = 0$, find (a) the position of the particle, (b) its velocity, and (c) its acceleration. Find (d) the period and (e) the amplitude of the motion.

- The position of a particle is given by the expression $x = 4.00 \cos(3.00\pi t + \pi)$, where x is in meters and t is in seconds. Determine (a) the frequency and (b) period of the motion, (c) the amplitude of the motion, (d) the phase constant, and (e) the position of the particle at $t = 0.250$ s.
- A piston in a gasoline engine is in simple harmonic motion. The engine is running at the rate of 3 600 rev/min. Taking the extremes of its position relative to its center point as ± 5.00 cm, find the magnitudes of the (a) maximum velocity and (b) maximum acceleration of the piston.
- A 1.00-kg object is attached to a horizontal spring. The spring is initially stretched by 0.100 m, and the object

is released from rest there. It proceeds to move without friction. The next time the speed of the object is zero is 0.500 s later. What is the maximum speed of the object?

- A simple harmonic oscillator takes 12.0 s to undergo five complete vibrations. Find (a) the period of its motion, (b) the frequency in hertz, and (c) the angular frequency in radians per second.
- A 7.00-kg object is hung from the bottom end of a vertical spring fastened to an overhead beam. The object is set into vertical oscillations having a period of 2.60 s. Find the force constant of the spring.
- At an outdoor market, a bunch of bananas attached to the bottom of a vertical spring of force constant 16.0 N/m is set into oscillatory motion with an amplitude of 20.0 cm. It is observed that the maximum speed of the bunch of bananas is 40.0 cm/s. What is the weight of the bananas in newtons?
- A vibration sensor, used in testing a washing machine, consists of a cube of aluminum 1.50 cm on edge mounted on one end of a strip of spring steel (like a hacksaw blade) that lies in a vertical plane. The strip's mass is small compared with that of the cube, but the strip's length is large compared with the size of the cube. The other end of the strip is clamped to the frame of the washing machine that is not operating. A horizontal force of 1.43 N applied to the cube is required to hold it 2.75 cm away from its equilibrium position. If it is released, what is its frequency of vibration?
- (a) A hanging spring stretches by 35.0 cm when an object of mass 450 g is hung on it at rest. In this situation, we define its position as $x = 0$. The object is pulled down an additional 18.0 cm and released from rest to oscillate without friction. What is its position x at a moment 84.4 s later? (b) Find the distance traveled by the vibrating object in part (a). (c) **What If?** Another hanging spring stretches by 35.5 cm when an object of mass 440 g is hung on it at rest. We define this new position as $x = 0$. This object is also pulled down an additional 18.0 cm and released from rest to oscillate without friction. Find its position 84.4 s later. (d) Find the distance traveled by the object in part (c). (e) Why are the answers to parts (a) and (c) so different when the initial data in parts (a) and (c) are so similar and the answers to parts (b) and (d) are relatively close? Does this circumstance reveal a fundamental difficulty in calculating the future?

13. **Review.** A particle moves along the x axis. It is initially at the position 0.270 m, moving with velocity 0.140 m/s and acceleration -0.320 m/s^2 . Suppose it moves as a particle under constant acceleration for 4.50 s. Find (a) its position and (b) its velocity at the end of this time interval. Next, assume it moves as a particle in simple harmonic motion for 4.50 s and $x = 0$ is its equilibrium position. Find (c) its position and (d) its velocity at the end of this time interval.
14. A ball dropped from a height of 4.00 m makes an elastic collision with the ground. Assuming no mechanical energy is lost due to air resistance, (a) show that the ensuing motion is periodic and (b) determine the period of the motion. (c) Is the motion simple harmonic? Explain.
15. A particle moving along the x axis in simple harmonic motion starts from its equilibrium position, the origin, at $t = 0$ and moves to the right. The amplitude of its motion is 2.00 cm, and the frequency is 1.50 Hz. (a) Find an expression for the position of the particle as a function of time. Determine (b) the maximum speed of the particle and (c) the earliest time ($t > 0$) at which the particle has this speed. Find (d) the maximum positive acceleration of the particle and (e) the earliest time ($t > 0$) at which the particle has this acceleration. (f) Find the total distance traveled by the particle between $t = 0$ and $t = 1.00 \text{ s}$.
16. The initial position, velocity, and acceleration of an object moving in simple harmonic motion are x_i , v_i , and a_i ; the angular frequency of oscillation is ω . (a) Show that the position and velocity of the object for all time can be written as

$$x(t) = x_i \cos \omega t + \left(\frac{v_i}{\omega}\right) \sin \omega t$$

$$v(t) = -x_i \omega \sin \omega t + v_i \cos \omega t$$

(b) Using A to represent the amplitude of the motion, show that

$$v^2 - ax = v_i^2 - a_i x_i = \omega^2 A^2$$

17. A particle moves in simple harmonic motion with a frequency of 3.00 Hz and an amplitude of 5.00 cm. (a) Through what total distance does the particle move during one cycle of its motion? (b) What is its maximum speed? Where does this maximum speed occur? (c) Find the maximum acceleration of the particle. Where in the motion does the maximum acceleration occur?
18. A 1.00-kg glider attached to a spring with a force constant of 25.0 N/m oscillates on a frictionless, horizontal air track. At $t = 0$, the glider is released from rest at $x = -3.00 \text{ cm}$ (that is, the spring is compressed by 3.00 cm). Find (a) the period of the glider's motion, (b) the maximum values of its speed and acceleration, and (c) the position, velocity, and acceleration as functions of time.
19. A 0.500-kg object attached to a spring with a force constant of 8.00 N/m vibrates in simple harmonic motion with an amplitude of 10.0 cm. Calculate the maximum

value of its (a) speed and (b) acceleration, (c) the speed and (d) the acceleration when the object is 6.00 cm from the equilibrium position, and (e) the time interval required for the object to move from $x = 0$ to $x = 8.00 \text{ cm}$.

20. You attach an object to the bottom end of a hanging vertical spring. It hangs at rest after extending the spring 18.3 cm. You then set the object vibrating. (a) Do you have enough information to find its period? (b) Explain your answer and state whatever you can about its period.

Section 15.3 Energy of the Simple Harmonic Oscillator

21. **AMT** To test the resiliency of its bumper during low-speed collisions, a 1 000-kg automobile is driven into a brick **M** wall. The car's bumper behaves like a spring with a force constant $5.00 \times 10^6 \text{ N/m}$ and compresses 3.16 cm as the car is brought to rest. What was the speed of the car before impact, assuming no mechanical energy is transformed or transferred away during impact with the wall?
22. A 200-g block is attached to a horizontal spring and executes simple harmonic motion with a period of 0.250 s. The total energy of the system is 2.00 J. Find (a) the force constant of the spring and (b) the amplitude of the motion.
23. A block of unknown mass is attached to a spring with a spring constant of 6.50 N/m and undergoes simple harmonic motion with an amplitude of 10.0 cm. When the block is halfway between its equilibrium position and the end point, its speed is measured to be 30.0 cm/s. Calculate (a) the mass of the block, (b) the period of the motion, and (c) the maximum acceleration of the block.
24. A block-spring system oscillates with an amplitude of 3.50 cm. The spring constant is 250 N/m and the mass of the block is 0.500 kg. Determine (a) the mechanical energy of the system, (b) the maximum speed of the block, and (c) the maximum acceleration.
25. A particle executes simple harmonic motion with an amplitude of 3.00 cm. At what position does its speed equal half of its maximum speed?
26. The amplitude of a system moving in simple harmonic motion is doubled. Determine the change in (a) the total energy, (b) the maximum speed, (c) the maximum acceleration, and (d) the period.
27. A 50.0-g object connected to a spring with a force **W** constant of 35.0 N/m oscillates with an amplitude of 4.00 cm on a frictionless, horizontal surface. Find (a) the total energy of the system and (b) the speed of the object when its position is 1.00 cm. Find (c) the kinetic energy and (d) the potential energy when its position is 3.00 cm.
28. A 2.00-kg object is attached to a spring and placed on a frictionless, horizontal surface. A horizontal force of 20.0 N is required to hold the object at rest when it is pulled 0.200 m from its equilibrium position (the origin of the x axis). The object is now released

from rest from this stretched position, and it subsequently undergoes simple harmonic oscillations. Find (a) the force constant of the spring, (b) the frequency of the oscillations, and (c) the maximum speed of the object. (d) Where does this maximum speed occur? (e) Find the maximum acceleration of the object. (f) Where does the maximum acceleration occur? (g) Find the total energy of the oscillating system. Find (h) the speed and (i) the acceleration of the object when its position is equal to one-third the maximum value.

29. A simple harmonic oscillator of amplitude A has a total energy E . Determine (a) the kinetic energy and (b) the potential energy when the position is one-third the amplitude. (c) For what values of the position does the kinetic energy equal one-half the potential energy? (d) Are there any values of the position where the kinetic energy is greater than the maximum potential energy? Explain.

30. Review. A 65.0-kg bungee jumper steps off a bridge with a light bungee cord tied to her body and to the bridge. The unstretched length of the cord is 11.0 m. The jumper reaches the bottom of her motion 36.0 m below the bridge before bouncing back. We wish to find the time interval between her leaving the bridge and her arriving at the bottom of her motion. Her overall motion can be separated into an 11.0-m free fall and a 25.0-m section of simple harmonic oscillation. (a) For the free-fall part, what is the appropriate analysis model to describe her motion? (b) For what time interval is she in free fall? (c) For the simple harmonic oscillation part of the plunge, is the system of the bungee jumper, the spring, and the Earth isolated or non-isolated? (d) From your response in part (c) find the spring constant of the bungee cord. (e) What is the location of the equilibrium point where the spring force balances the gravitational force exerted on the jumper? (f) What is the angular frequency of the oscillation? (g) What time interval is required for the cord to stretch by 25.0 m? (h) What is the total time interval for the entire 36.0-m drop?

31. Review. A 0.250-kg block resting on a frictionless, horizontal surface is attached to a spring whose force constant is 83.8 N/m as in Figure P15.31. A horizontal force \vec{F} causes the spring to stretch a distance of 5.46 cm from its equilibrium position. (a) Find the magnitude of \vec{F} . (b) What is the total energy stored in the system when the spring is stretched? (c) Find the magnitude of the acceleration of the block just after the applied force is removed. (d) Find the speed of the block when it first reaches the equilibrium position. (e) If the surface is not frictionless but the block still reaches the equilibrium position, would your answer to part (d) be larger or smaller? (f) What other information would you need to know to find the actual answer to part (d) in this case? (g) What is the largest value of the coefficient of

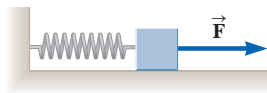


Figure P15.31

friction that would allow the block to reach the equilibrium position?

32. AMT. A 326-g object is attached to a spring and executes simple harmonic motion with a period of 0.250 s. If the total energy of the system is 5.83 J, find (a) the maximum speed of the object, (b) the force constant of the spring, and (c) the amplitude of the motion.

Section 15.4 Comparing Simple Harmonic Motion with Uniform Circular Motion

33. While driving behind a car traveling at 3.00 m/s, you notice that one of the car's tires has a small hemispherical bump on its rim as shown in Figure P15.33. (a) Explain why the bump, from your viewpoint behind the car, executes simple harmonic motion. (b) If the radii of the car's tires are 0.300 m, what is the bump's period of oscillation?

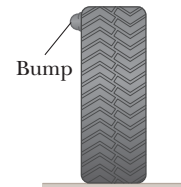


Figure P15.33

Section 15.5 The Pendulum

Problem 68 in Chapter 1 can also be assigned with this section.

34. A “seconds pendulum” is one that moves through its equilibrium position once each second. (The period of the pendulum is precisely 2 s.) The length of a seconds pendulum is 0.992 7 m at Tokyo, Japan, and 0.994 2 m at Cambridge, England. What is the ratio of the free-fall accelerations at these two locations?

35. A simple pendulum makes 120 complete oscillations in 3.00 min at a location where $g = 9.80 \text{ m/s}^2$. Find (a) the period of the pendulum and (b) its length.

36. A particle of mass m slides without friction inside a hemispherical bowl of radius R . Show that if the particle starts from rest with a small displacement from equilibrium, it moves in simple harmonic motion with an angular frequency equal to that of a simple pendulum of length R . That is, $\omega = \sqrt{g/R}$.

37. M A physical pendulum in the form of a planar object moves in simple harmonic motion with a frequency of 0.450 Hz. The pendulum has a mass of 2.20 kg, and the pivot is located 0.350 m from the center of mass. Determine the moment of inertia of the pendulum about the pivot point.

38. A physical pendulum in the form of a planar object moves in simple harmonic motion with a frequency f . The pendulum has a mass m , and the pivot is located a distance d from the center of mass. Determine the moment of inertia of the pendulum about the pivot point.

39. The angular position of a pendulum is represented by the equation $\theta = 0.032 0 \cos \omega t$, where θ is in radians and $\omega = 4.43 \text{ rad/s}$. Determine the period and length of the pendulum.

40. Consider the physical pendulum of Figure 15.17. (a) Represent its moment of inertia about an axis passing

through its center of mass and parallel to the axis passing through its pivot point as I_{CM} . Show that its period is

$$T = 2\pi\sqrt{\frac{I_{CM} + md^2}{mgd}}$$

where d is the distance between the pivot point and the center of mass. (b) Show that the period has a minimum value when d satisfies $md^2 = I_{CM}$.

41. A simple pendulum has a mass of 0.250 kg and a length of 1.00 m. It is displaced through an angle of 15.0° and then released. Using the analysis model of a particle in simple harmonic motion, what are (a) the maximum speed of the bob, (b) its maximum angular acceleration, and (c) the maximum restoring force on the bob? (d) **What If?** Solve parts (a) through (c) again by using analysis models introduced in earlier chapters. (e) Compare the answers.
42. A very light rigid rod of length 0.500 m extends straight out from one end of a meterstick. The combination is suspended from a pivot at the upper end of the rod as shown in Figure P15.42. The combination is then pulled out by a small angle and released. (a) Determine the period of oscillation of the system. (b) By what percentage does the period differ from the period of a simple pendulum 1.00 m long?

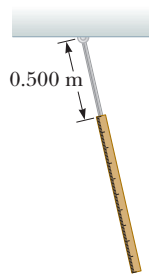


Figure P15.42

43. **Review.** A simple pendulum is 5.00 m long. What is the period of small oscillations for this pendulum if it is located in an elevator (a) accelerating upward at 5.00 m/s^2 ? (b) Accelerating downward at 5.00 m/s^2 ? (c) What is the period of this pendulum if it is placed in a truck that is accelerating horizontally at 5.00 m/s^2 ?
44. A small object is attached to the end of a string to form a simple pendulum. The period of its harmonic motion is measured for small angular displacements and three lengths. For lengths of 1.000 m, 0.750 m, and 0.500 m, total time intervals for 50 oscillations of 99.8 s, 86.6 s, and 71.1 s are measured with a stopwatch. (a) Determine the period of motion for each length. (b) Determine the mean value of g obtained from these three independent measurements and compare it with the accepted value. (c) Plot T^2 versus L and obtain a value for g from the slope of your best-fit straight-line graph. (d) Compare the value found in part (c) with that obtained in part (b).

45. A watch balance wheel (Fig. P15.45) has a period of oscillation of 0.250 s. The wheel is constructed so that its mass of 20.0 g is concentrated around a rim of radius 0.500 cm. What are (a) the wheel's moment of inertia and (b) the torsion constant of the attached spring?




Figure P15.45

Section 15.6 Damped Oscillations

46. A pendulum with a length of 1.00 m is released from an initial angle of 15.0° . After 1 000 s, its amplitude has been reduced by friction to 5.50° . What is the value of $b/2m$?
47. A 10.6-kg object oscillates at the end of a vertical spring that has a spring constant of $2.05 \times 10^4 \text{ N/m}$. The effect of air resistance is represented by the damping coefficient $b = 3.00 \text{ N} \cdot \text{s/m}$. (a) Calculate the frequency of the damped oscillation. (b) By what percentage does the amplitude of the oscillation decrease in each cycle? (c) Find the time interval that elapses while the energy of the system drops to 5.00% of its initial value.
48. Show that the time rate of change of mechanical energy for a damped, undriven oscillator is given by $dE/dt = -bv^2$ and hence is always negative. To do so, differentiate the expression for the mechanical energy of an oscillator, $E = \frac{1}{2}mv^2 + \frac{1}{2}kx^2$, and use Equation 15.31.
49. Show that Equation 15.32 is a solution of Equation 15.31 provided that $b^2 < 4mk$.

Section 15.7 Forced Oscillations

50. A baby bounces up and down in her crib. Her mass is 12.5 kg, and the crib mattress can be modeled as a light spring with force constant 700 N/m. (a) The baby soon learns to bounce with maximum amplitude and minimum effort by bending her knees at what frequency? (b) If she were to use the mattress as a trampoline—losing contact with it for part of each cycle—what minimum amplitude of oscillation does she require?
51. As you enter a fine restaurant, you realize that you have accidentally brought a small electronic timer from home instead of your cell phone. In frustration, you drop the timer into a side pocket of your suit coat, not realizing that the timer is operating. The arm of your chair presses the light cloth of your coat against your body at one spot. Fabric with a length L hangs freely below that spot, with the timer at the bottom. At one point during your dinner, the timer goes off and a buzzer and a vibrator turn on and off with a frequency of 1.50 Hz. It makes the hanging part of your coat swing back and forth with remarkably large amplitude, drawing everyone's attention. Find the value of L .
52. A block weighing 40.0 N is suspended from a spring that has a force constant of 200 N/m. The system is undamped ($b = 0$) and is subjected to a harmonic driving force of frequency 10.0 Hz, resulting in a forced-motion amplitude of 2.00 cm. Determine the maximum value of the driving force.
53. A 2.00-kg object attached to a spring moves without friction ($b = 0$) and is driven by an external force given by the expression $F = 3.00 \sin(2\pi t)$, where F is in newtons and t is in seconds. The force constant of the spring is 20.0 N/m. Find (a) the resonance angular frequency of the system, (b) the angular frequency of the driven system, and (c) the amplitude of the motion.

54. Considering an undamped, forced oscillator ($b = 0$), show that Equation 15.35 is a solution of Equation 15.34, with an amplitude given by Equation 15.36.

55. Damping is negligible for a 0.150-kg object hanging from a light, 6.30-N/m spring. A sinusoidal force with an amplitude of 1.70 N drives the system. At what frequency will the force make the object vibrate with an amplitude of 0.440 m?

Additional Problems

56. The mass of the deuterium molecule (D_2) is twice that of the hydrogen molecule (H_2). If the vibrational frequency of H_2 is 1.30×10^{14} Hz, what is the vibrational frequency of D_2 ? Assume the “spring constant” of attracting forces is the same for the two molecules.

57. An object of mass m moves in simple harmonic motion with amplitude 12.0 cm on a light spring. Its maximum acceleration is 108 cm/s². Regard m as a variable. (a) Find the period T of the object. (b) Find its frequency f . (c) Find the maximum speed v_{\max} of the object. (d) Find the total energy E of the object–spring system. (e) Find the force constant k of the spring. (f) Describe the pattern of dependence of each of the quantities T , f , v_{\max} , E , and k on m .

58. **Review.** This problem extends the reasoning of Problem 75 in Chapter 9. Two gliders are set in motion on an air track. Glider 1 has mass $m_1 = 0.240$ kg and moves to the right with speed 0.740 m/s. It will have a rear-end collision with glider 2, of mass $m_2 = 0.360$ kg, which initially moves to the right with speed 0.120 m/s. A light spring of force constant 45.0 N/m is attached to the back end of glider 2 as shown in Figure P9.75. When glider 1 touches the spring, superglue instantly and permanently makes it stick to its end of the spring. (a) Find the common speed the two gliders have when the spring is at maximum compression. (b) Find the maximum spring compression distance. The motion after the gliders become attached consists of a combination of (1) the constant-velocity motion of the center of mass of the two-glider system found in part (a) and (2) simple harmonic motion of the gliders relative to the center of mass. (c) Find the energy of the center-of-mass motion. (d) Find the energy of the oscillation.

59. A small ball of mass M is attached to the end of a uniform rod of equal mass M and length L that is pivoted at the top (Fig. P15.59). Determine the tensions in the rod (a) at the pivot and (b) at the point P when the system is stationary. (c) Calculate the period of oscillation for small displacements from equilibrium and (d) determine this period for $L = 2.00$ m.

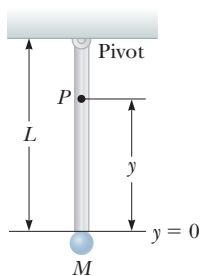


Figure P15.59

60. **Review.** A rock rests on a concrete sidewalk. An earthquake strikes, making the ground move vertically in simple harmonic motion with a constant frequency of 2.40 Hz and with gradually increasing amplitude. (a) With what amplitude does the ground vibrate when

the rock begins to lose contact with the sidewalk? Another rock is sitting on the concrete bottom of a swimming pool full of water. The earthquake produces only vertical motion, so the water does not slosh from side to side. (b) Present a convincing argument that when the ground vibrates with the amplitude found in part (a), the submerged rock also barely loses contact with the floor of the swimming pool.

61. Four people, each with a mass of 72.4 kg, are in a car with a mass of 1 130 kg. An earthquake strikes. The vertical oscillations of the ground surface make the car bounce up and down on its suspension springs, but the driver manages to pull off the road and stop. When the frequency of the shaking is 1.80 Hz, the car exhibits a maximum amplitude of vibration. The earthquake ends, and the four people leave the car as fast as they can. By what distance does the car’s undamaged suspension lift the car’s body as the people get out?

62. To account for the walking speed of a bipedal or quadrupedal animal, model a leg that is not contacting the ground as a uniform rod of length ℓ , swinging as a physical pendulum through one half of a cycle, in resonance. Let θ_{\max} represent its amplitude. (a) Show that the animal’s speed is given by the expression

$$v = \frac{\sqrt{6g\ell \sin \theta_{\max}}}{\pi}$$

if θ_{\max} is sufficiently small that the motion is nearly simple harmonic. An empirical relationship that is based on the same model and applies over a wider range of angles is

$$v = \frac{\sqrt{6g\ell \cos(\theta_{\max}/2) \sin \theta_{\max}}}{\pi}$$

(b) Evaluate the walking speed of a human with leg length 0.850 m and leg-swing amplitude 28.0°. (c) What leg length would give twice the speed for the same angular amplitude?

63. The free-fall acceleration on Mars is 3.7 m/s². (a) What length of pendulum has a period of 1.0 s on Earth? (b) What length of pendulum would have a 1.0-s period on Mars? An object is suspended from a spring with force constant 10 N/m. Find the mass suspended from this spring that would result in a period of 1.0 s (c) on Earth and (d) on Mars.

64. An object attached to a spring vibrates with simple harmonic motion as described by Figure P15.64. For this motion, find (a) the amplitude, (b) the period, (c) the

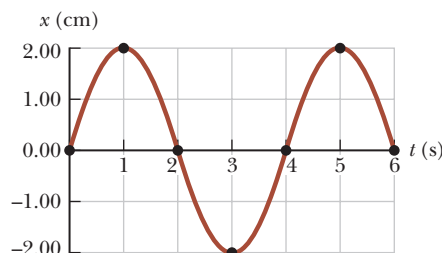


Figure P15.64

angular frequency, (d) the maximum speed, (e) the maximum acceleration, and (f) an equation for its position x as a function of time.

- 65. Review.** A large block P attached to a light spring executes horizontal, simple harmonic motion as it slides across a frictionless surface with a frequency $f = 1.50$ Hz. Block B rests on it as shown in Figure P15.65, and the coefficient of static friction between the two is $\mu_s = 0.600$. What maximum amplitude of oscillation can the system have if block B is not to slip?

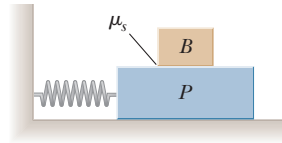


Figure P15.65
Problems 65 and 66.

- 66. Review.** A large block P attached to a light spring executes horizontal, simple harmonic motion as it slides across a frictionless surface with a frequency f . Block B rests on it as shown in Figure P15.65, and the coefficient of static friction between the two is μ_s . What maximum amplitude of oscillation can the system have if block B is not to slip?

- 67.** A pendulum of length L and mass M has a spring of force constant k connected to it at a distance h below its point of suspension (Fig. P15.67). Find the frequency of vibration of the system for small values of the amplitude (small θ). Assume the vertical suspension rod of length L is rigid, but ignore its mass.

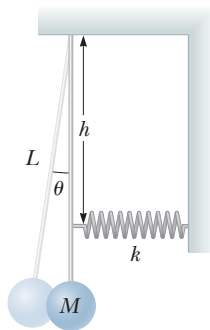


Figure P15.67

- 68.** A block of mass m is connected to two springs of force constants k_1 and k_2 in two ways as shown in Figure P15.68. In both cases, the block moves on a frictionless table after it is displaced from equilibrium and released. Show that in the two cases the block exhibits simple harmonic motion with periods

$$(a) T = 2\pi\sqrt{\frac{m(k_1 + k_2)}{k_1 k_2}} \quad \text{and} \quad (b) T = 2\pi\sqrt{\frac{m}{k_1 + k_2}}$$

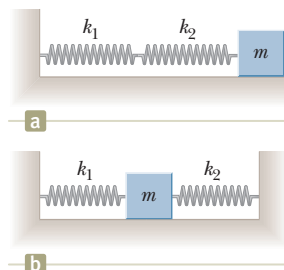


Figure P15.68

- 69.** A horizontal plank of mass 5.00 kg and length 2.00 m is pivoted at one end. The plank's other end is supported by a spring of force constant 100 N/m (Fig. P15.69). The plank is displaced by a small angle θ from its horizontal equilibrium position and released. Find the

angular frequency with which the plank moves with simple harmonic motion.

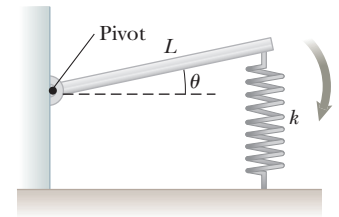


Figure P15.69
Problems 69 and 70.

- 70.** A horizontal plank of mass m and length L is pivoted at one end. The plank's other end is supported by a spring of force constant k (Fig. P15.69). The plank is displaced by a small angle θ from its horizontal equilibrium position and released. Find the angular frequency with which the plank moves with simple harmonic motion.
- 71. Review.** A particle of mass 4.00 kg is attached to a spring with a force constant of 100 N/m. It is oscillating on a frictionless, horizontal surface with an amplitude of 2.00 m. A 6.00 -kg object is dropped vertically on top of the 4.00 -kg object as it passes through its equilibrium point. The two objects stick together. (a) What is the new amplitude of the vibrating system after the collision? (b) By what factor has the period of the system changed? (c) By how much does the energy of the system change as a result of the collision? (d) Account for the change in energy.
- 72.** A ball of mass m is connected to two rubber bands of length L , each under tension T as shown in Figure P15.72. The ball is displaced by a small distance y perpendicular to the length of the rubber bands. Assuming the tension does not change, show that (a) the restoring force is $-(2T/L)y$ and (b) the system exhibits simple harmonic motion with an angular frequency $\omega = \sqrt{2T/mL}$.

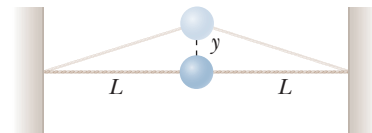


Figure P15.72

- 73. Review.** One end of a light spring with force constant $k = 100$ N/m is attached to a vertical wall. A light string is tied to the other end of the horizontal spring. As shown in Figure P15.73, the string changes from horizontal to vertical as it passes over a pulley of mass M in the shape of a solid disk of radius $R = 2.00$ cm. The pulley is free to turn on a fixed, smooth axle. The vertical section of the string supports an object of mass $m = 200$ g. The string does not slip at its contact with the pulley. The object is pulled downward a small distance and released. (a) What is the angular frequency ω of oscillation of the object in terms of the mass M ? (b) What is the highest possible value of the angular frequency of oscillation of

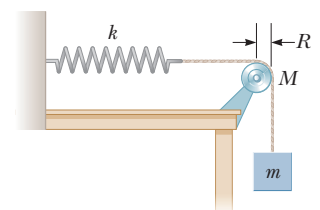


Figure P15.73

the object? (c) What is the highest possible value of the angular frequency of oscillation of the object if the pulley radius is doubled to $R = 4.00$ cm?

74. People who ride motorcycles and bicycles learn to look out for bumps in the road and especially for *washboarding*, a condition in which many equally spaced ridges are worn into the road. What is so bad about washboarding? A motorcycle has several springs and shock absorbers in its suspension, but you can model it as a single spring supporting a block. You can estimate the force constant by thinking about how far the spring compresses when a heavy rider sits on the seat. A motorcyclist traveling at highway speed must be particularly careful of washboard bumps that are a certain distance apart. What is the order of magnitude of their separation distance?

75. A simple pendulum with a length of 2.23 m and a mass of 6.74 kg is given an initial speed of 2.06 m/s at its equilibrium position. Assume it undergoes simple harmonic motion. Determine (a) its period, (b) its total energy, and (c) its maximum angular displacement.

76. When a block of mass M , connected to the end of a spring of mass $m_s = 7.40$ g and force constant k , is set into simple harmonic motion, the period of its motion is

$$T = 2\pi\sqrt{\frac{M + (m_s/3)}{k}}$$

A two-part experiment is conducted with the use of blocks of various masses suspended vertically from the spring as shown in Figure P15.76. (a) Static extensions of 17.0, 29.3, 35.3, 41.3, 47.1, and 49.3 cm are measured for M values of 20.0, 40.0, 50.0, 60.0, 70.0, and 80.0 g, respectively. Construct a graph of Mg versus x and perform a linear least-squares fit to the data. (b) From the slope of your graph, determine a value for k for this spring. (c) The system is now set into simple harmonic motion, and periods are measured with a stopwatch. With $M = 80.0$ g, the total time interval required for ten oscillations is measured to be 13.41 s. The experiment is repeated with M values of 70.0, 60.0, 50.0, 40.0, and 20.0 g, with corresponding time intervals for ten oscillations of 12.52, 11.67, 10.67, 9.62, and 7.03 s. Make a table of these masses and times. (d) Compute the experimental value for T from each of these measurements. (e) Plot a graph of T^2 versus M and (f) determine a value for k from the slope of the linear least-squares fit through the data points. (g) Compare this value of k with that obtained in part (b). (h) Obtain a value for m_s from your graph and compare it with the given value of 7.40 g.



Figure P15.76

77. **Review.** A light balloon filled with helium of density 0.179 kg/m³ is tied to a light string of length $L = 3.00$ m. The string is tied to the ground forming an “inverted” simple pendulum (Fig. 15.77a). If the balloon is displaced slightly from equilibrium as in Figure P15.77b and released, (a) show that the motion is simple harmonic and (b) determine the period of

the motion. Take the density of air to be 1.20 kg/m³. *Hint:* Use an analogy with the simple pendulum and see Chapter 14. Assume the air applies a buoyant force on the balloon but does not otherwise affect its motion.

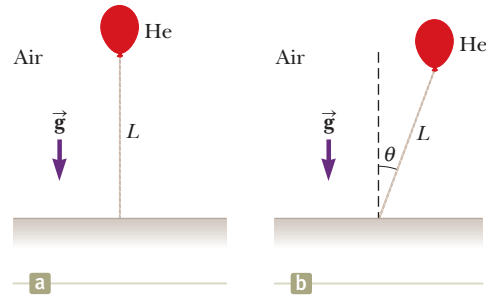


Figure P15.77

78. Consider the damped oscillator illustrated in Figure 15.20. The mass of the object is 375 g, the spring constant is 100 N/m, and $b = 0.100$ N · s/m. (a) Over what time interval does the amplitude drop to half its initial value? (b) **What If?** Over what time interval does the mechanical energy drop to half its initial value? (c) Show that, in general, the fractional rate at which the amplitude decreases in a damped harmonic oscillator is one-half the fractional rate at which the mechanical energy decreases.

79. A particle with a mass of 0.500 kg is attached to a horizontal spring with a force constant of 50.0 N/m. At the moment $t = 0$, the particle has its maximum speed of 20.0 m/s and is moving to the left. (a) Determine the particle’s equation of motion, specifying its position as a function of time. (b) Where in the motion is the potential energy three times the kinetic energy? (c) Find the minimum time interval required for the particle to move from $x = 0$ to $x = 1.00$ m. (d) Find the length of a simple pendulum with the same period.

80. Your thumb squeaks on a plate you have just washed. Your sneakers squeak on the gym floor. Car tires squeal when you start or stop abruptly. You can make a goblet sing by wiping your moistened finger around its rim. When chalk squeaks on a blackboard, you can see that it makes a row of regularly spaced dashes. As these examples suggest, vibration commonly results when friction acts on a moving elastic object. The oscillation is not simple harmonic motion, but is called *stick-and-slip*. This problem models stick-and-slip motion.

A block of mass m is attached to a fixed support by a horizontal spring with force constant k and negligible mass (Fig. P15.80). Hooke’s law describes the spring

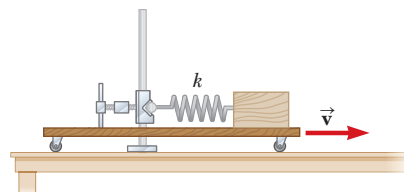


Figure P15.80

both in extension and in compression. The block sits on a long horizontal board, with which it has coefficient of static friction μ_s and a smaller coefficient of kinetic friction μ_k . The board moves to the right at constant speed v . Assume the block spends most of its time sticking to the board and moving to the right with it, so the speed v is small in comparison to the average speed the block has as it slips back toward the left. (a) Show that the maximum extension of the spring from its unstressed position is very nearly given by $\mu_s mg/k$. (b) Show that the block oscillates around an equilibrium position at which the spring is stretched by $\mu_k mg/k$. (c) Graph the block's position versus time. (d) Show that the amplitude of the block's motion is

$$A = \frac{(\mu_s - \mu_k)mg}{k}$$

(e) Show that the period of the block's motion is

$$T = \frac{2(\mu_s - \mu_k)mg}{vk} + \pi\sqrt{\frac{m}{k}}$$

It is the excess of static over kinetic friction that is important for the vibration. "The squeaky wheel gets the grease" because even a viscous fluid cannot exert a force of static friction.

81. **Review.** A lobsterman's buoy is a solid wooden cylinder of radius r and mass M . It is weighted at one end so that it floats upright in calm seawater, having density ρ . A passing shark tugs on the slack rope mooring the buoy to a lobster trap, pulling the buoy down a distance x from its equilibrium position and releasing it. (a) Show that the buoy will execute simple harmonic motion if the resistive effects of the water are ignored. (b) Determine the period of the oscillations.

82. **Why is the following situation impossible?** Your job involves building very small damped oscillators. One of your designs involves a spring-object oscillator with a spring of force constant $k = 10.0$ N/m and an object of mass $m = 1.00$ g. Your design objective is that the oscillator undergo many oscillations as its amplitude falls to 25.0% of its initial value in a certain time interval. Measurements on your latest design show that the amplitude falls to the 25.0% value in 23.1 ms. This time interval is too long for what is needed in your project. To shorten the time interval, you double the damping constant b for the oscillator. This doubling allows you to reach your design objective.

83. Two identical steel balls, each of mass 67.4 g, are moving in opposite directions at 5.00 m/s. They collide head-on and bounce apart elastically. By squeezing one of the balls in a vise while precise measurements are made of the resulting amount of compression, you find that Hooke's law is a good model of the ball's elastic behavior. A force of 16.0 kN exerted by each jaw of the vise reduces the diameter by 0.200 mm. Model the motion of each ball, while the balls are in contact, as one-half of a cycle of simple harmonic motion. Compute the time interval for which the balls are in contact. (If you solved Problem 57 in Chapter 7, compare your results from this problem with your results from that one.)

Challenge Problems

84. A smaller disk of radius r and mass m is attached rigidly to the face of a second larger disk of radius R and mass M as shown in Figure P15.84. The center of the small disk is located at the edge of the large disk. The large disk is mounted at its center on a frictionless axle. The assembly is rotated through a small angle θ from its equilibrium position and released. (a) Show that the speed of the center of the small disk as it passes through the equilibrium position is

$$v = 2 \left[\frac{Rg(1 - \cos \theta)}{(M/m) + (r/R)^2 + 2} \right]^{1/2}$$

(b) Show that the period of the motion is

$$T = 2\pi \left[\frac{(M + 2m)R^2 + mr^2}{2mgR} \right]^{1/2}$$

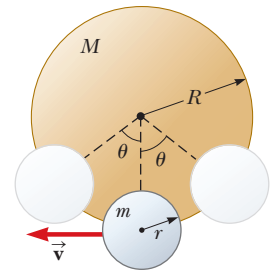


Figure P15.84

85. An object of mass $m_1 = 9.00$ kg is in equilibrium when connected to a light spring of constant $k = 100$ N/m that is fastened to a wall as shown in Figure P15.85a. A second object, $m_2 = 7.00$ kg, is slowly pushed up against m_1 , compressing the spring by the amount $A = 0.200$ m (see Fig. P15.85b). The system is then released, and both objects start moving to the right on the frictionless surface. (a) When m_1 reaches the equilibrium point, m_2 loses contact with m_1 (see Fig. P15.85c) and moves to the right with speed v . Determine the value of v . (b) How far apart are the objects when the spring is first stretched for the first time (the distance D in Fig. P15.85d)?

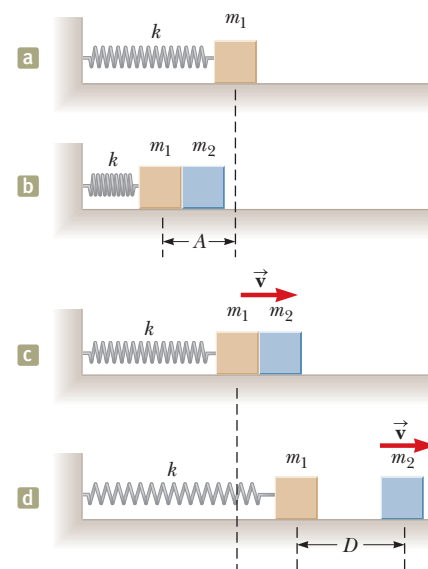


Figure P15.85

86. **Review.** Why is the following situation impossible? You are in the high-speed package delivery business. Your competitor in the next building gains the right-of-way to

build an evacuated tunnel just above the ground all the way around the Earth. By firing packages into this tunnel at just the right speed, your competitor is able to send the packages into orbit around the Earth in this tunnel so that they arrive on the exact opposite side of the Earth in a very short time interval. You come up with a competing idea. Figuring that the distance *through* the Earth is shorter than the distance *around* the Earth, you obtain permits to build an evacuated tunnel through the center of the Earth (Fig. P15.86). By simply dropping packages into this tunnel, they fall downward and arrive at the other end of your tunnel, which is in a building right next to the other end of your competitor's tunnel. Because your packages arrive on the other side of the Earth in a shorter time interval, you win the competition and your business flourishes. *Note:* An object at a distance r from the center of the Earth is pulled toward the center of the Earth only by the mass within the sphere of radius r (the reddish region in Fig. P15.86). Assume the Earth has uniform density.

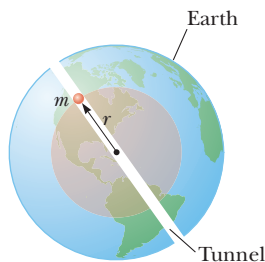


Figure P15.86

87. A block of mass M is connected to a spring of mass m and oscillates in simple harmonic motion on a frictionless, horizontal track (Fig. P15.87). The force constant of the spring is k , and the equilibrium length is ℓ . Assume all portions of the spring oscillate in phase and the velocity of a segment of the spring of length dx

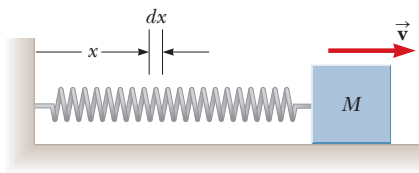


Figure P15.87

is proportional to the distance x from the fixed end; that is, $v_x = (x/\ell)v$. Also, notice that the mass of a segment of the spring is $dm = (m/\ell)dx$. Find (a) the kinetic energy of the system when the block has a speed v and (b) the period of oscillation.

88. **Review.** A system consists of a spring with force constant $k = 1\,250$ N/m, length $L = 1.50$ m, and an object of mass $m = 5.00$ kg attached to the end (Fig. P15.88). The object is placed at the level of the point of attachment with the spring unstretched, at position $y_i = L$, and then it is released so that it swings like a pendulum. (a) Find the y position of the object at the lowest point. (b) Will the pendulum's period be greater or less than the period of a simple pendulum with the same mass m and length L ? Explain.

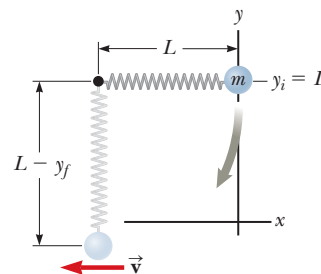


Figure P15.88

89. A light, cubical container of volume a^3 is initially filled with a liquid of mass density ρ as shown in Figure P15.89a. The cube is initially supported by a light string to form a simple pendulum of length L_i , measured from the center of mass of the filled container, where $L_i \gg a$. The liquid is allowed to flow from the bottom of the container at a constant rate (dM/dt). At any time t , the level of the liquid in the container is h and the length of the pendulum is L (measured relative to the instantaneous center of mass) as shown in Figure P15.89b. (a) Find the period of the pendulum as a function of time. (b) What is the period of the pendulum after the liquid completely runs out of the container?

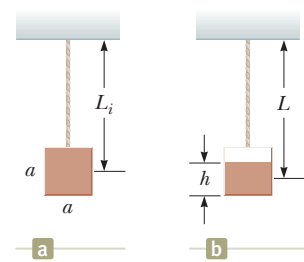


Figure P15.89

Wave Motion

CHAPTER

16



- 16.1 Propagation of a Disturbance
- 16.2 Analysis Model: Traveling Wave
- 16.3 The Speed of Waves on Strings
- 16.4 Reflection and Transmission
- 16.5 Rate of Energy Transfer by Sinusoidal Waves on Strings
- 16.6 The Linear Wave Equation

Many of us experienced waves as children when we dropped a pebble into a pond. At the point the pebble hits the water's surface, circular waves are created. These waves move outward from the creation point in expanding circles until they reach the shore. If you were to examine carefully the motion of a small object floating on the disturbed water, you would see that the object moves vertically and horizontally about its original position but does not undergo any net displacement away from or toward the point at which the pebble hit the water. The small elements of water in contact with the object, as well as all the other water elements on the pond's surface, behave in the same way. That is, the water wave moves from the point of origin to the shore, but the water is not carried with it.

The world is full of waves, the two main types being *mechanical* waves and *electromagnetic* waves. In the case of mechanical waves, some physical medium is being disturbed; in our pebble example, elements of water are disturbed. Electromagnetic waves do not require a medium to propagate; some examples of electromagnetic waves are visible light, radio waves, television signals, and x-rays. Here, in this part of the book, we study only mechanical waves.

Consider again the small object floating on the water. We have caused the object to move at one point in the water by dropping a pebble at another location. The object has gained kinetic energy from our action, so energy must have transferred from the point at

Lifeguards in New South Wales, Australia, practice taking their boat over large water waves breaking near the shore. A wave moving over the surface of water is one example of a mechanical wave. (*Travel Ink/Gallo Images/Getty Images*)

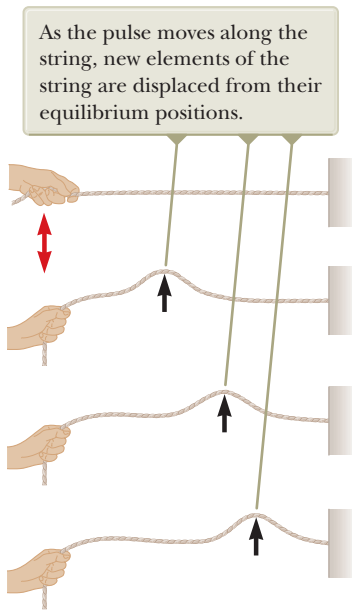


Figure 16.1 A hand moves the end of a stretched string up and down once (red arrow), causing a pulse to travel along the string.

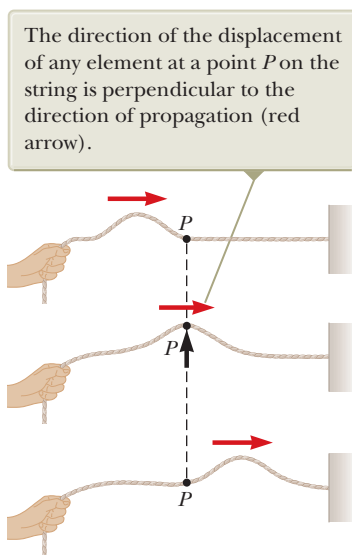


Figure 16.2 The displacement of a particular string element for a transverse pulse traveling on a stretched string.

which the pebble is dropped to the position of the object. This feature is central to wave motion: *energy* is transferred over a distance, but *matter* is not.

16.1 Propagation of a Disturbance

The introduction to this chapter alluded to the essence of wave motion: the transfer of energy through space without the accompanying transfer of matter. In the list of energy transfer mechanisms in Chapter 8, two mechanisms—mechanical waves and electromagnetic radiation—depend on waves. By contrast, in another mechanism, matter transfer, the energy transfer is accompanied by a movement of matter through space with no wave character in the process.

All mechanical waves require (1) some source of disturbance, (2) a medium containing elements that can be disturbed, and (3) some physical mechanism through which elements of the medium can influence each other. One way to demonstrate wave motion is to flick one end of a long string that is under tension and has its opposite end fixed as shown in Figure 16.1. In this manner, a single bump (called a *pulse*) is formed and travels along the string with a definite speed. Figure 16.1 represents four consecutive “snapshots” of the creation and propagation of the traveling pulse. The hand is the source of the disturbance. The string is the medium through which the pulse travels—individual elements of the string are disturbed from their equilibrium position. Furthermore, the elements of the string are connected together so they influence each other. The pulse has a definite height and a definite speed of propagation along the medium. The shape of the pulse changes very little as it travels along the string.¹

We shall first focus on a pulse traveling through a medium. Once we have explored the behavior of a pulse, we will then turn our attention to a *wave*, which is a *periodic* disturbance traveling through a medium. We create a pulse on our string by flicking the end of the string up and down repeatedly, we would create a traveling wave, which has characteristics a pulse does not have. We shall explore these characteristics in Section 16.2.

As the pulse in Figure 16.1 travels, each disturbed element of the string moves in a direction *perpendicular* to the direction of propagation. Figure 16.2 illustrates this point for one particular element, labeled *P*. Notice that no part of the string ever moves in the direction of the propagation. A traveling wave or pulse that causes the elements of the disturbed medium to move perpendicular to the direction of propagation is called a **transverse wave**.

Compare this wave with another type of pulse, one moving down a long, stretched spring as shown in Figure 16.3. The left end of the spring is pushed briefly to the right and then pulled briefly to the left. This movement creates a sudden compression of a region of the coils. The compressed region travels along the spring (to the right in Fig. 16.3). Notice that the direction of the displacement of the coils is *parallel* to the direction of propagation of the compressed region. A traveling wave or pulse that causes the elements of the medium to move parallel to the direction of propagation is called a **longitudinal wave**.

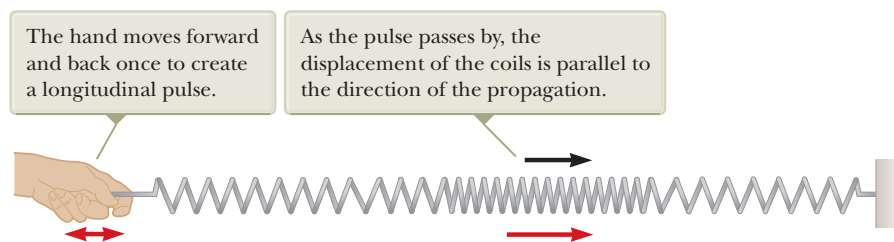


Figure 16.3 A longitudinal pulse along a stretched spring.

¹In reality, the pulse changes shape and gradually spreads out during the motion. This effect, called *dispersion*, is common to many mechanical waves as well as to electromagnetic waves. We do not consider dispersion in this chapter.

Sound waves, which we shall discuss in Chapter 17, are another example of longitudinal waves. The disturbance in a sound wave is a series of high-pressure and low-pressure regions that travel through air.

Some waves in nature exhibit a combination of transverse and longitudinal displacements. Surface-water waves are a good example. When a water wave travels on the surface of deep water, elements of water at the surface move in nearly circular paths as shown in Figure 16.4. The disturbance has both transverse and longitudinal components. The transverse displacements seen in Figure 16.4 represent the variations in vertical position of the water elements. The longitudinal displacements represent elements of water moving back and forth in a horizontal direction.

The three-dimensional waves that travel out from a point under the Earth's surface at which an earthquake occurs are of both types, transverse and longitudinal. The longitudinal waves are the faster of the two, traveling at speeds in the range of 7 to 8 km/s near the surface. They are called **P waves**, with "P" standing for *primary*, because they travel faster than the transverse waves and arrive first at a seismograph (a device used to detect waves due to earthquakes). The slower transverse waves, called **S waves**, with "S" standing for *secondary*, travel through the Earth at 4 to 5 km/s near the surface. By recording the time interval between the arrivals of these two types of waves at a seismograph, the distance from the seismograph to the point of origin of the waves can be determined. This distance is the radius of an imaginary sphere centered on the seismograph. The origin of the waves is located somewhere on that sphere. The imaginary spheres from three or more monitoring stations located far apart from one another intersect at one region of the Earth, and this region is where the earthquake occurred.

Consider a pulse traveling to the right on a long string as shown in Figure 16.5. Figure 16.5a represents the shape and position of the pulse at time $t = 0$. At this time, the shape of the pulse, whatever it may be, can be represented by some mathematical function that we will write as $y(x, 0) = f(x)$. This function describes the transverse position y of the element of the string located at each value of x at time $t = 0$. Because the speed of the pulse is v , the pulse has traveled to the right a distance vt at the time t (Fig. 16.5b). We assume the shape of the pulse does not change with time. Therefore, at time t , the shape of the pulse is the same as it was at time $t = 0$ as in Figure 16.5a. Consequently, an element of the string at x at this time has the same y position as an element located at $x - vt$ had at time $t = 0$:

$$y(x, t) = y(x - vt, 0)$$

In general, then, we can represent the transverse position y for all positions and times, measured in a stationary frame with the origin at O , as

$$y(x, t) = f(x - vt) \tag{16.1}$$

Similarly, if the pulse travels to the left, the transverse positions of elements of the string are described by

$$y(x, t) = f(x + vt) \tag{16.2}$$

The function y , sometimes called the **wave function**, depends on the two variables x and t . For this reason, it is often written $y(x, t)$, which is read "y as a function of x and t ."

It is important to understand the meaning of y . Consider an element of the string at point P in Figure 16.5, identified by a particular value of its x coordinate. As the pulse passes through P , the y coordinate of this element increases, reaches a maximum, and then decreases to zero. The wave function $y(x, t)$ represents the y coordinate—the transverse position—of any element located at position x at any time t . Furthermore, if t is fixed (as, for example, in the case of taking a snapshot of the pulse), the wave function $y(x)$, sometimes called the **waveform**, defines a curve representing the geometric shape of the pulse at that time.

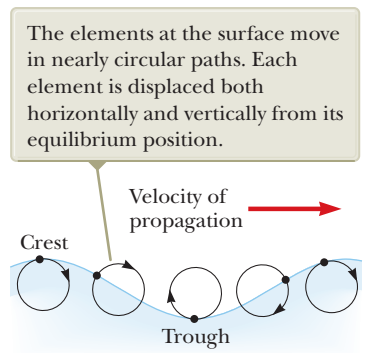


Figure 16.4 The motion of water elements on the surface of deep water in which a wave is propagating is a combination of transverse and longitudinal displacements.

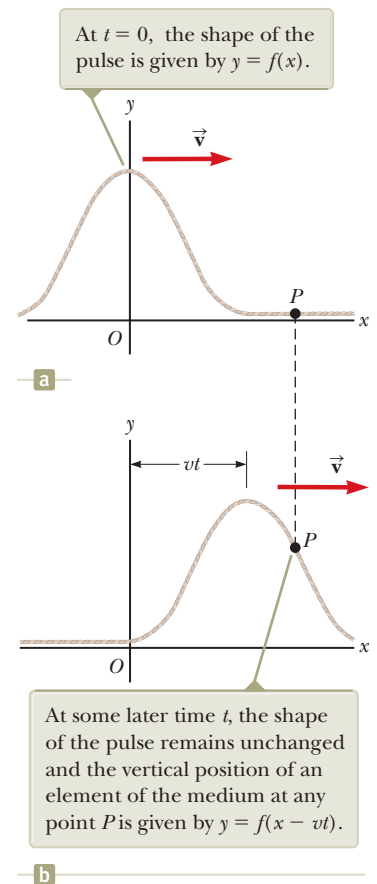


Figure 16.5 A one-dimensional pulse traveling to the right on a string with a speed v .

- Quick Quiz 16.1** (i) In a long line of people waiting to buy tickets, the first person leaves and a pulse of motion occurs as people step forward to fill the gap. As each person steps forward, the gap moves through the line. Is the propagation of this gap (a) transverse or (b) longitudinal? (ii) Consider “the wave” at a baseball game: people stand up and raise their arms as the wave arrives at their location, and the resultant pulse moves around the stadium. Is this wave (a) transverse or (b) longitudinal?

Example 16.1 A Pulse Moving to the Right

A pulse moving to the right along the x axis is represented by the wave function

$$y(x, t) = \frac{2}{(x - 3.0t)^2 + 1}$$

where x and y are measured in centimeters and t is measured in seconds. Find expressions for the wave function at $t = 0$, $t = 1.0$ s, and $t = 2.0$ s.

SOLUTION

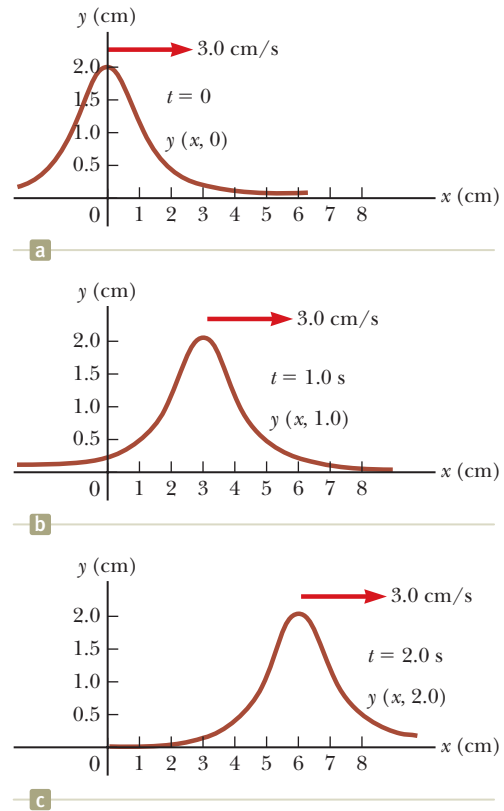
Conceptualize Figure 16.6a shows the pulse represented by this wave function at $t = 0$. Imagine this pulse moving to the right at a speed of 3.0 cm/s and maintaining its shape as suggested by Figures 16.6b and 16.6c.

Categorize We categorize this example as a relatively simple analysis problem in which we interpret the mathematical representation of a pulse.

Analyze The wave function is of the form $y = f(x - vt)$. Inspection of the expression for $y(x, t)$ and comparison to Equation 16.1 reveal that the wave speed is $v = 3.0$ cm/s. Furthermore, by letting $x - 3.0t = 0$, we find that the maximum value of y is given by $A = 2.0$ cm.

Figure 16.6

(Example 16.1) Graphs of the function $y(x, t) = 2/[(x - 3.0t)^2 + 1]$ at (a) $t = 0$, (b) $t = 1.0$ s, and (c) $t = 2.0$ s.



Write the wave function expression at $t = 0$:

$$y(x, 0) = \frac{2}{x^2 + 1}$$

Write the wave function expression at $t = 1.0$ s:

$$y(x, 1.0) = \frac{2}{(x - 3.0)^2 + 1}$$

Write the wave function expression at $t = 2.0$ s:

$$y(x, 2.0) = \frac{2}{(x - 6.0)^2 + 1}$$

For each of these expressions, we can substitute various values of x and plot the wave function. This procedure yields the wave functions shown in the three parts of Figure 16.6.

Finalize These snapshots show that the pulse moves to the right without changing its shape and that it has a constant speed of 3.0 cm/s.

WHAT IF? What if the wave function were

$$y(x, t) = \frac{4}{(x + 3.0t)^2 + 1}$$

How would that change the situation?

Answer One new feature in this expression is the plus sign in the denominator rather than the minus sign. The new expression represents a pulse with a similar shape as that in Figure 16.6, but moving to the left as time progresses.

16.1 continued

Another new feature here is the numerator of 4 rather than 2. Therefore, the new expression represents a pulse with twice the height of that in Figure 16.6.

16.2 Analysis Model: Traveling Wave

In this section, we introduce an important wave function whose shape is shown in Figure 16.7. The wave represented by this curve is called a **sinusoidal wave** because the curve is the same as that of the function $\sin \theta$ plotted against θ . A sinusoidal wave could be established on the rope in Figure 16.1 by shaking the end of the rope up and down in simple harmonic motion.

The sinusoidal wave is the simplest example of a periodic continuous wave and can be used to build more complex waves (see Section 18.8). The brown curve in Figure 16.7 represents a snapshot of a traveling sinusoidal wave at $t = 0$, and the blue curve represents a snapshot of the wave at some later time t . Imagine two types of motion that can occur. First, the entire waveform in Figure 16.7 moves to the right so that the brown curve moves toward the right and eventually reaches the position of the blue curve. This movement is the motion of the *wave*. If we focus on one element of the medium, such as the element at $x = 0$, we see that each element moves up and down along the y axis in simple harmonic motion. This movement is the motion of the *elements of the medium*. It is important to differentiate between the motion of the wave and the motion of the elements of the medium.

In the early chapters of this book, we developed several analysis models based on three simplification models: the particle, the system, and the rigid object. With our introduction to waves, we can develop a new simplification model, the **wave**, that will allow us to explore more analysis models for solving problems. An ideal particle has zero size. We can build physical objects with nonzero size as combinations of particles. Therefore, the particle can be considered a basic building block. An ideal wave has a single frequency and is infinitely long; that is, the wave exists throughout the Universe. (A wave of finite length must necessarily have a mixture of frequencies.) When this concept is explored in Section 18.8, we will find that ideal waves can be combined to build complex waves, just as we combined particles.

In what follows, we will develop the principal features and mathematical representations of the analysis model of a **traveling wave**. This model is used in situations in which a wave moves through space without interacting with other waves or particles.

Figure 16.8a shows a snapshot of a traveling wave moving through a medium. Figure 16.8b shows a graph of the position of one element of the medium as a function of time. A point in Figure 16.8a at which the displacement of the element from its normal position is highest is called the **crest** of the wave. The lowest point is called the **trough**. The distance from one crest to the next is called the **wavelength** λ (Greek letter lambda). More generally, the wavelength is the minimum distance between any two identical points on adjacent waves as shown in Figure 16.8a.

If you count the number of seconds between the arrivals of two adjacent crests at a given point in space, you measure the **period** T of the waves. In general, the period is the time interval required for two identical points of adjacent waves to pass by a point as shown in Figure 16.8b. The period of the wave is the same as the period of the simple harmonic oscillation of one element of the medium.

The same information is more often given by the inverse of the period, which is called the **frequency** f . In general, the frequency of a periodic wave is the number of crests (or troughs, or any other point on the wave) that pass a given point in a unit time interval. The frequency of a sinusoidal wave is related to the period by the expression

$$f = \frac{1}{T} \quad (16.3)$$

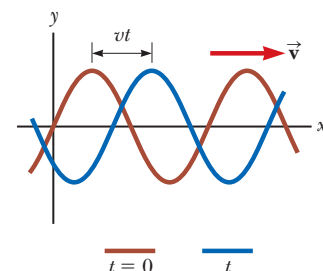
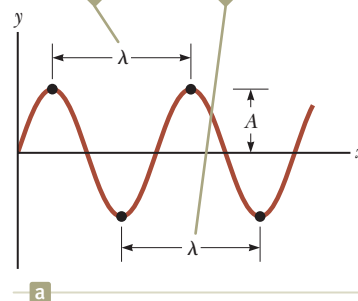


Figure 16.7 A one-dimensional sinusoidal wave traveling to the right with a speed v . The brown curve represents a snapshot of the wave at $t = 0$, and the blue curve represents a snapshot at some later time t .

The wavelength λ of a wave is the distance between adjacent crests or adjacent troughs.



The period T of a wave is the time interval required for the element to complete one cycle of its oscillation and for the wave to travel one wavelength.

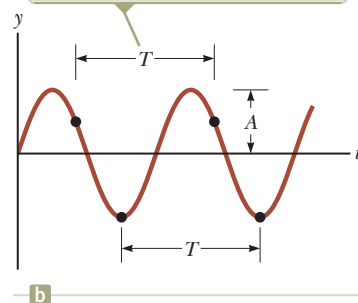


Figure 16.8 (a) A snapshot of a sinusoidal wave. (b) The position of one element of the medium as a function of time.

Pitfall Prevention 16.1

What's the Difference Between Figures 16.8a and 16.8b? Notice the visual similarity between Figures 16.8a and 16.8b. The shapes are the same, but (a) is a graph of vertical position versus horizontal position, whereas (b) is vertical position versus time. Figure 16.8a is a pictorial representation of the wave for a series of elements of the medium; it is what you would see at an instant of time. Figure 16.8b is a graphical representation of the position of one element of the medium as a function of time. That both figures have the identical shape represents Equation 16.1: a wave is the same function of both x and t .

The frequency of the wave is the same as the frequency of the simple harmonic oscillation of one element of the medium. The most common unit for frequency, as we learned in Chapter 15, is s^{-1} , or **hertz** (Hz). The corresponding unit for T is seconds.

The maximum position of an element of the medium relative to its equilibrium position is called the **amplitude** A of the wave as indicated in Figure 16.8.

Waves travel with a specific speed, and this speed depends on the properties of the medium being disturbed. For instance, sound waves travel through room-temperature air with a speed of about 343 m/s (781 mi/h), whereas they travel through most solids with a speed greater than 343 m/s.

Consider the sinusoidal wave in Figure 16.8a, which shows the position of the wave at $t = 0$. Because the wave is sinusoidal, we expect the wave function at this instant to be expressed as $y(x, 0) = A \sin ax$, where A is the amplitude and a is a constant to be determined. At $x = 0$, we see that $y(0, 0) = A \sin a(0) = 0$, consistent with Figure 16.8a. The next value of x for which y is zero is $x = \lambda/2$. Therefore,

$$y\left(\frac{\lambda}{2}, 0\right) = A \sin\left(a \frac{\lambda}{2}\right) = 0$$

For this equation to be true, we must have $a\lambda/2 = \pi$, or $a = 2\pi/\lambda$. Therefore, the function describing the positions of the elements of the medium through which the sinusoidal wave is traveling can be written

$$y(x, 0) = A \sin\left(\frac{2\pi}{\lambda} x\right) \quad (16.4)$$

where the constant A represents the wave amplitude and the constant λ is the wavelength. Notice that the vertical position of an element of the medium is the same whenever x is increased by an integral multiple of λ . Based on our discussion of Equation 16.1, if the wave moves to the right with a speed v , the wave function at some later time t is

$$y(x, t) = A \sin\left[\frac{2\pi}{\lambda}(x - vt)\right] \quad (16.5)$$

If the wave were traveling to the left, the quantity $x - vt$ would be replaced by $x + vt$ as we learned when we developed Equations 16.1 and 16.2.

By definition, the wave travels through a displacement Δx equal to one wavelength λ in a time interval Δt of one period T . Therefore, the wave speed, wavelength, and period are related by the expression

$$v = \frac{\Delta x}{\Delta t} = \frac{\lambda}{T} \quad (16.6)$$

Substituting this expression for v into Equation 16.5 gives

$$y = A \sin\left[2\pi\left(\frac{x}{\lambda} - \frac{t}{T}\right)\right] \quad (16.7)$$

This form of the wave function shows the *periodic* nature of y . Note that we will often use y rather than $y(x, t)$ as a shorthand notation. At any given time t , y has the same value at the positions x , $x + \lambda$, $x + 2\lambda$, and so on. Furthermore, at any given position x , the value of y is the same at times t , $t + T$, $t + 2T$, and so on.

We can express the wave function in a convenient form by defining two other quantities, the **angular wave number** k (usually called simply the **wave number**) and the **angular frequency** ω :

Angular wave number ►

$$k \equiv \frac{2\pi}{\lambda} \quad (16.8)$$

Angular frequency ►

$$\omega \equiv \frac{2\pi}{T} = 2\pi f \quad (16.9)$$

Using these definitions, Equation 16.7 can be written in the more compact form

$$y = A \sin(kx - \omega t) \quad (16.10)$$

◀ Wave function for a sinusoidal wave

Using Equations 16.3, 16.8, and 16.9, the wave speed v originally given in Equation 16.6 can be expressed in the following alternative forms:

$$v = \frac{\omega}{k} \quad (16.11)$$

$$v = \lambda f \quad (16.12)$$

◀ Speed of a sinusoidal wave

The wave function given by Equation 16.10 assumes the vertical position y of an element of the medium is zero at $x = 0$ and $t = 0$. That need not be the case. If it is not, we generally express the wave function in the form

$$y = A \sin(kx - \omega t + \phi) \quad (16.13)$$

◀ General expression for a sinusoidal wave

where ϕ is the **phase constant**, just as we learned in our study of periodic motion in Chapter 15. This constant can be determined from the initial conditions. The primary equations in the mathematical representation of the traveling wave analysis model are Equations 16.3, 16.10, and 16.12.

- Quick Quiz 16.2** A sinusoidal wave of frequency f is traveling along a stretched string. The string is brought to rest, and a second traveling wave of frequency $2f$ is established on the string. (i) What is the wave speed of the second wave? (a) twice that of the first wave (b) half that of the first wave (c) the same as that of the first wave (d) impossible to determine (ii) From the same choices, describe the wavelength of the second wave. (iii) From the same choices, describe the amplitude of the second wave.

Example 16.2 A Traveling Sinusoidal Wave AM

A sinusoidal wave traveling in the positive x direction has an amplitude of 15.0 cm, a wavelength of 40.0 cm, and a frequency of 8.00 Hz. The vertical position of an element of the medium at $t = 0$ and $x = 0$ is also 15.0 cm as shown in Figure 16.9.

(A) Find the wave number k , period T , angular frequency ω , and speed v of the wave.

SOLUTION

Conceptualize Figure 16.9 shows the wave at $t = 0$. Imagine this wave moving to the right and maintaining its shape.

Categorize From the description in the problem statement, we see that we are analyzing a mechanical wave moving through a medium, so we categorize the problem with the *traveling wave* model.

Analyze

Evaluate the wave number from Equation 16.8:

$$k = \frac{2\pi}{\lambda} = \frac{2\pi \text{ rad}}{40.0 \text{ cm}} = 15.7 \text{ rad/m}$$

Evaluate the period of the wave from Equation 16.3:

$$T = \frac{1}{f} = \frac{1}{8.00 \text{ s}^{-1}} = 0.125 \text{ s}$$

Evaluate the angular frequency of the wave from Equation 16.9:

$$\omega = 2\pi f = 2\pi(8.00 \text{ s}^{-1}) = 50.3 \text{ rad/s}$$

Evaluate the wave speed from Equation 16.12:

$$v = \lambda f = (40.0 \text{ cm})(8.00 \text{ s}^{-1}) = 3.20 \text{ m/s}$$

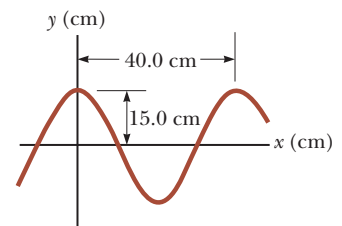


Figure 16.9 (Example 16.2) A sinusoidal wave of wavelength $\lambda = 40.0$ cm and amplitude $A = 15.0$ cm.

continued

16.2 continued

(B) Determine the phase constant ϕ and write a general expression for the wave function.

SOLUTION

Substitute $A = 15.0$ cm, $y = 15.0$ cm, $x = 0$, and $t = 0$ into Equation 16.13:

Write the wave function:

Substitute the values for A , k , and ω in SI units into this expression:

$$15.0 = (15.0) \sin \phi \rightarrow \sin \phi = 1 \rightarrow \phi = \frac{\pi}{2} \text{ rad}$$

$$y = A \sin \left(kx - \omega t + \frac{\pi}{2} \right) = A \cos (kx - \omega t)$$

$$y = 0.150 \cos (15.7x - 50.3t)$$

Finalize Review the results carefully and make sure you understand them. How would the graph in Figure 16.9 change if the phase angle were zero? How would the graph change if the amplitude were 30.0 cm? How would the graph change if the wavelength were 10.0 cm?

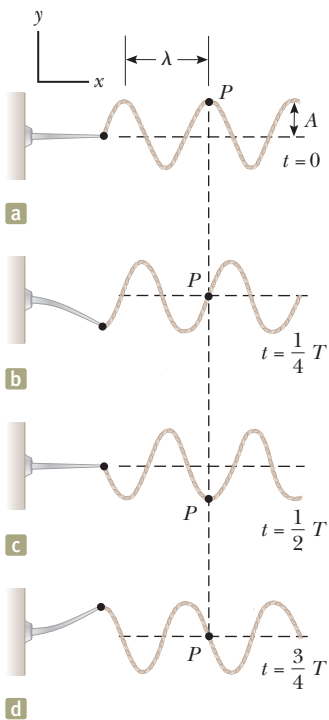


Figure 16.10 One method for producing a sinusoidal wave on a string. The left end of the string is connected to a blade that is set into oscillation. Every element of the string, such as that at point P , oscillates with simple harmonic motion in the vertical direction.

Sinusoidal Waves on Strings

In Figure 16.1, we demonstrated how to create a pulse by jerking a taut string up and down once. To create a series of such pulses—a wave—let's replace the hand with an oscillating blade vibrating in simple harmonic motion. Figure 16.10 represents snapshots of the wave created in this way at intervals of $T/4$. Because the end of the blade oscillates in simple harmonic motion, each element of the string, such as that at P , also oscillates vertically with simple harmonic motion. Therefore, every element of the string can be treated as a simple harmonic oscillator vibrating with a frequency equal to the frequency of oscillation of the blade.² Notice that while each element oscillates in the y direction, the wave travels to the right in the $+x$ direction with a speed v . Of course, that is the definition of a transverse wave.

If we define $t = 0$ as the time for which the configuration of the string is as shown in Figure 16.10a, the wave function can be written as

$$y = A \sin (kx - \omega t)$$

We can use this expression to describe the motion of any element of the string. An element at point P (or any other element of the string) moves only vertically, and so its x coordinate remains constant. Therefore, the **transverse speed** v_y (not to be confused with the wave speed v) and the **transverse acceleration** a_y of elements of the string are

$$v_y = \left. \frac{dy}{dt} \right]_{x=\text{constant}} = \frac{\partial y}{\partial t} = -\omega A \cos (kx - \omega t) \quad (16.14)$$

$$a_y = \left. \frac{dv_y}{dt} \right]_{x=\text{constant}} = \frac{\partial v_y}{\partial t} = -\omega^2 A \sin (kx - \omega t) \quad (16.15)$$

These expressions incorporate partial derivatives because y depends on both x and t . In the operation $\partial y/\partial t$, for example, we take a derivative with respect to t while holding x constant. The maximum magnitudes of the transverse speed and transverse acceleration are simply the absolute values of the coefficients of the cosine and sine functions:

$$v_{y,\text{max}} = \omega A \quad (16.16)$$

$$a_{y,\text{max}} = \omega^2 A \quad (16.17)$$

The transverse speed and transverse acceleration of elements of the string do not reach their maximum values simultaneously. The transverse speed reaches its maximum value (ωA) when $y = 0$, whereas the magnitude of the transverse acceleration

²In this arrangement, we are assuming that a string element always oscillates in a vertical line. The tension in the string would vary if an element were allowed to move sideways. Such motion would make the analysis very complex.

reaches its maximum value ($\omega^2 A$) when $y = \pm A$. Finally, Equations 16.16 and 16.17 are identical in mathematical form to the corresponding equations for simple harmonic motion, Equations 15.17 and 15.18.

- Quick Quiz 16.3** The amplitude of a wave is doubled, with no other changes made to the wave. As a result of this doubling, which of the following statements is correct? (a) The speed of the wave changes. (b) The frequency of the wave changes. (c) The maximum transverse speed of an element of the medium changes. (d) Statements (a) through (c) are all true. (e) None of statements (a) through (c) is true.

Pitfall Prevention 16.2

Two Kinds of Speed/Velocity

Do not confuse v , the speed of the wave as it propagates along the string, with v_y , the transverse velocity of a point on the string. The speed v is constant for a uniform medium, whereas v_y varies sinusoidally.

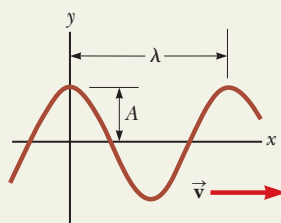
Analysis Model Traveling Wave

Imagine a source vibrating such that it influences the medium that is in contact with the source. Such a source creates a disturbance that propagates through the medium. If the source vibrates in simple harmonic motion with period T , sinusoidal waves propagate through the medium at a speed given by

$$v = \frac{\lambda}{T} = \lambda f \quad (16.6, 16.12)$$

where λ is the **wavelength** of the wave and f is its **frequency**. A sinusoidal wave can be expressed as

$$y = A \sin(kx - \omega t) \quad (16.10)$$



where A is the **amplitude** of the wave, k is its **wave number**, and ω is its **angular frequency**.

Examples:

- a vibrating blade sends a sinusoidal wave down a string attached to the blade
- a loudspeaker vibrates back and forth, emitting sound waves into the air (Chapter 17)
- a guitar body vibrates, emitting sound waves into the air (Chapter 18)
- a vibrating electric charge creates an electromagnetic wave that propagates into space at the speed of light (Chapter 34)

16.3 The Speed of Waves on Strings

One aspect of the behavior of *linear* mechanical waves is that the wave speed depends only on the properties of the medium through which the wave travels. Waves for which the amplitude A is small relative to the wavelength λ can be represented as linear waves. (See Section 16.6.) In this section, we determine the speed of a transverse wave traveling on a stretched string.

Let us use a mechanical analysis to derive the expression for the speed of a pulse traveling on a stretched string under tension T . Consider a pulse moving to the right with a uniform speed v , measured relative to a stationary (with respect to the Earth) inertial reference frame as shown in Figure 16.11a. Newton's laws are valid in any inertial reference frame. Therefore, let us view this pulse from a different inertial reference frame, one that moves along with the pulse at the same speed so that the pulse appears to be at rest in the frame as in Figure 16.11b. In this reference frame, the pulse remains fixed and each element of the string moves to the left through the pulse shape.

A short element of the string, of length Δs , forms an approximate arc of a circle of radius R as shown in the magnified view in Figure 16.11b. In our moving frame of reference, the element of the string moves to the left with speed v . As it travels through the arc, we can model the element as a particle in uniform circular motion. This element has a centripetal acceleration of v^2/R , which is supplied by components of the force \vec{T} whose magnitude is the tension in the string. The force \vec{T} acts on each side of the element, tangent to the arc, as in Figure 16.11b. The horizontal components of \vec{T} cancel, and each vertical component $T \sin \theta$ acts downward. Hence, the magnitude of the total radial force on the element is $2T \sin \theta$.

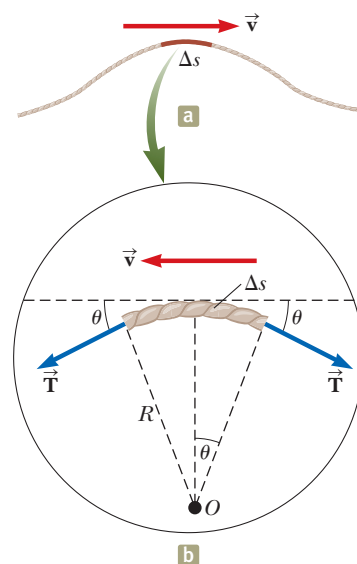


Figure 16.11 (a) In the reference frame of the Earth, a pulse moves to the right on a string with speed v . (b) In a frame of reference moving to the right with the pulse, the small element of length Δs moves to the left with speed v .

Because the element is small, θ is small and we can use the small-angle approximation $\sin \theta \approx \theta$. Therefore, the magnitude of the total radial force is

$$F_r = 2T \sin \theta \approx 2T\theta$$

The element has mass $m = \mu \Delta s$, where μ is the mass per unit length of the string. Because the element forms part of a circle and subtends an angle of 2θ at the center, $\Delta s = R(2\theta)$, and

$$m = \mu \Delta s = 2\mu R\theta$$

The element of the string is modeled as a particle under a net force. Therefore, applying Newton's second law to this element in the radial direction gives

$$F_r = \frac{mv^2}{R} \rightarrow 2T\theta = \frac{2\mu R\theta v^2}{R} \rightarrow T = \mu v^2$$

Solving for v gives

$$v = \sqrt{\frac{T}{\mu}} \quad (16.18)$$

Speed of a wave on a stretched string

Pitfall Prevention 16.3

Multiple T 's Do not confuse the T in Equation 16.18 for the tension with the symbol T used in this chapter for the period of a wave. The context of the equation should help you identify which quantity is meant. There simply aren't enough letters in the alphabet to assign a unique letter to each variable!

Notice that this derivation is based on the assumption that the pulse height is small relative to the length of the pulse. Using this assumption, we were able to use the approximation $\sin \theta \approx \theta$. Furthermore, the model assumes that the tension T is not affected by the presence of the pulse, so T is the same at all points on the pulse. Finally, this proof does *not* assume any particular shape for the pulse. We therefore conclude that a pulse of *any shape* will travel on the string with speed $v = \sqrt{T/\mu}$, without any change in pulse shape.

- Quick Quiz 16.4** Suppose you create a pulse by moving the free end of a taut string up and down once with your hand beginning at $t = 0$. The string is attached at its other end to a distant wall. The pulse reaches the wall at time t . Which of the following actions, taken by itself, decreases the time interval required for the pulse to reach the wall? More than one choice may be correct. (a) moving your hand more quickly, but still only up and down once by the same amount (b) moving your hand more slowly, but still only up and down once by the same amount (c) moving your hand a greater distance up and down in the same amount of time (d) moving your hand a lesser distance up and down in the same amount of time (e) using a heavier string of the same length and under the same tension (f) using a lighter string of the same length and under the same tension (g) using a string of the same linear mass density but under decreased tension (h) using a string of the same linear mass density but under increased tension

Example 16.3 The Speed of a Pulse on a Cord **AM**

A uniform string has a mass of 0.300 kg and a length of 6.00 m (Fig. 16.12). The string passes over a pulley and supports a 2.00-kg object. Find the speed of a pulse traveling along this string.

SOLUTION

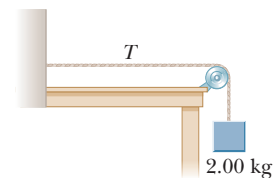
Conceptualize In Figure 16.12, the hanging block establishes a tension in the horizontal string. This tension determines the speed with which waves move on the string.

Categorize To find the tension in the string, we model the hanging block as a *particle in equilibrium*. Then we use the tension to evaluate the wave speed on the string using Equation 16.18.

Analyze Apply the particle in equilibrium model to the block:

Solve for the tension in the string:

Figure 16.12 (Example 16.3) The tension T in the cord is maintained by the suspended object. The speed of any wave traveling along the cord is given by $v = \sqrt{T/\mu}$.



$$\sum F_y = T - m_{\text{block}}g = 0$$

$$T = m_{\text{block}}g$$

▶ 16.3 continued

Use Equation 16.18 to find the wave speed, using $\mu = m_{\text{string}}/\ell$ for the linear mass density of the string:

$$v = \sqrt{\frac{T}{\mu}} = \sqrt{\frac{m_{\text{block}}g\ell}{m_{\text{string}}}}$$

Evaluate the wave speed:

$$v = \sqrt{\frac{(2.00 \text{ kg})(9.80 \text{ m/s}^2)(6.00 \text{ m})}{0.300 \text{ kg}}} = 19.8 \text{ m/s}$$

Finalize The calculation of the tension neglects the small mass of the string. Strictly speaking, the string can never be exactly straight; therefore, the tension is not uniform.

WHAT IF? What if the block were swinging back and forth with respect to the vertical like a pendulum? How would that affect the wave speed on the string?

Answer The swinging block is categorized as a *particle under a net force*. The magnitude of one of the forces on the block is the tension in the string, which determines the wave speed. As the block swings, the tension changes, so the wave speed changes.

When the block is at the bottom of the swing, the string is vertical and the tension is larger than the weight of the block because the net force must be upward to provide the centripetal acceleration of the block. Therefore, the wave speed must be greater than 19.8 m/s.

When the block is at its highest point at the end of a swing, it is momentarily at rest, so there is no centripetal acceleration at that instant. The block is a particle in equilibrium in the radial direction. The tension is balanced by a component of the gravitational force on the block. Therefore, the tension is smaller than the weight and the wave speed is less than 19.8 m/s. With what frequency does the speed of the wave vary? Is it the same frequency as the pendulum?

Example 16.4 Rescuing the Hiker AM

An 80.0-kg hiker is trapped on a mountain ledge following a storm. A helicopter rescues the hiker by hovering above him and lowering a cable to him. The mass of the cable is 8.00 kg, and its length is 15.0 m. A sling of mass 70.0 kg is attached to the end of the cable. The hiker attaches himself to the sling, and the helicopter then accelerates upward. Terrified by hanging from the cable in midair, the hiker tries to signal the pilot by sending transverse pulses up the cable. A pulse takes 0.250 s to travel the length of the cable. What is the acceleration of the helicopter? Assume the tension in the cable is uniform.

SOLUTION

Conceptualize Imagine the effect of the acceleration of the helicopter on the cable. The greater the upward acceleration, the larger the tension in the cable. In turn, the larger the tension, the higher the speed of pulses on the cable.

Categorize This problem is a combination of one involving the speed of pulses on a string and one in which the hiker and sling are modeled as a *particle under a net force*.

Analyze Use the time interval for the pulse to travel from the hiker to the helicopter to find the speed of the pulses on the cable:

$$v = \frac{\Delta x}{\Delta t} = \frac{15.0 \text{ m}}{0.250 \text{ s}} = 60.0 \text{ m/s}$$

Solve Equation 16.18 for the tension in the cable:

$$(1) \quad v = \sqrt{\frac{T}{\mu}} \rightarrow T = \mu v^2$$

Model the hiker and sling as a particle under a net force, noting that the acceleration of this particle of mass m is the same as the acceleration of the helicopter:

$$\sum F = ma \rightarrow T - mg = ma$$

Solve for the acceleration and substitute the tension from Equation (1):

$$a = \frac{T}{m} - g = \frac{\mu v^2}{m} - g = \frac{m_{\text{cable}} v^2}{\ell_{\text{cable}} m} - g$$

continued

16.4 continued

Substitute numerical values:

$$a = \frac{(8.00 \text{ kg})(60.0 \text{ m/s})^2}{(15.0 \text{ m})(150.0 \text{ kg})} - 9.80 \text{ m/s}^2 = 3.00 \text{ m/s}^2$$

Finalize A real cable has stiffness in addition to tension. Stiffness tends to return a wire to its original straight-line shape even when it is not under tension. For example, a piano wire straightens if released from a curved shape; package-wrapping string does not.

Stiffness represents a restoring force in addition to tension and increases the wave speed. Consequently, for a real cable, the speed of 60.0 m/s that we determined is most likely associated with a smaller acceleration of the helicopter.

16.4 Reflection and Transmission

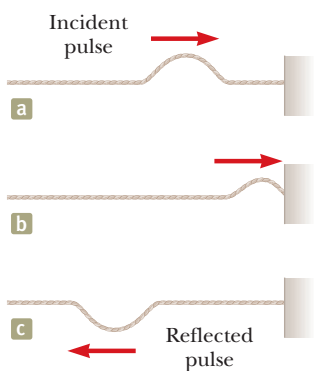


Figure 16.13 The reflection of a traveling pulse at the fixed end of a stretched string. The reflected pulse is inverted, but its shape is otherwise unchanged.

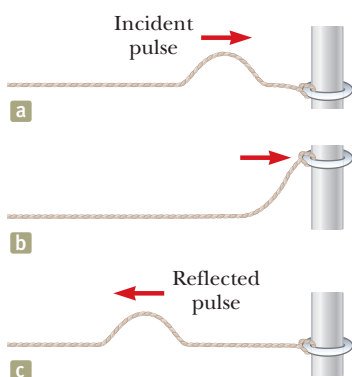


Figure 16.14 The reflection of a traveling pulse at the free end of a stretched string. The reflected pulse is not inverted.

The traveling wave model describes waves traveling through a uniform medium without interacting with anything along the way. We now consider how a traveling wave is affected when it encounters a change in the medium. For example, consider a pulse traveling on a string that is rigidly attached to a support at one end as in Figure 16.13. When the pulse reaches the support, a severe change in the medium occurs: the string ends. As a result, the pulse undergoes **reflection**; that is, the pulse moves back along the string in the opposite direction.

Notice that the reflected pulse is *inverted*. This inversion can be explained as follows. When the pulse reaches the fixed end of the string, the string produces an upward force on the support. By Newton's third law, the support must exert an equal-magnitude and oppositely directed (downward) reaction force on the string. This downward force causes the pulse to invert upon reflection.

Now consider another case. This time, the pulse arrives at the end of a string that is free to move vertically as in Figure 16.14. The tension at the free end is maintained because the string is tied to a ring of negligible mass that is free to slide vertically on a smooth post without friction. Again, the pulse is reflected, but this time it is not inverted. When it reaches the post, the pulse exerts a force on the free end of the string, causing the ring to accelerate upward. The ring rises as high as the incoming pulse, and then the downward component of the tension force pulls the ring back down. This movement of the ring produces a reflected pulse that is not inverted and that has the same amplitude as the incoming pulse.

Finally, consider a situation in which the boundary is intermediate between these two extremes. In this case, part of the energy in the incident pulse is reflected and part undergoes **transmission**; that is, some of the energy passes through the boundary. For instance, suppose a light string is attached to a heavier string as in Figure 16.15. When a pulse traveling on the light string reaches the boundary between the two strings, part of the pulse is reflected and inverted and part is transmitted to the heavier string. The reflected pulse is inverted for the same reasons described earlier in the case of the string rigidly attached to a support.

The reflected pulse has a smaller amplitude than the incident pulse. In Section 16.5, we show that the energy carried by a wave is related to its amplitude. According to the principle of conservation of energy, when the pulse breaks up into a reflected pulse and a transmitted pulse at the boundary, the sum of the energies of these two pulses must equal the energy of the incident pulse. Because the reflected pulse contains only part of the energy of the incident pulse, its amplitude must be smaller.

When a pulse traveling on a heavy string strikes the boundary between the heavy string and a lighter one as in Figure 16.16, again part is reflected and part is transmitted. In this case, the reflected pulse is not inverted.

In either case, the relative heights of the reflected and transmitted pulses depend on the relative densities of the two strings. If the strings are identical, there is no discontinuity at the boundary and no reflection takes place.

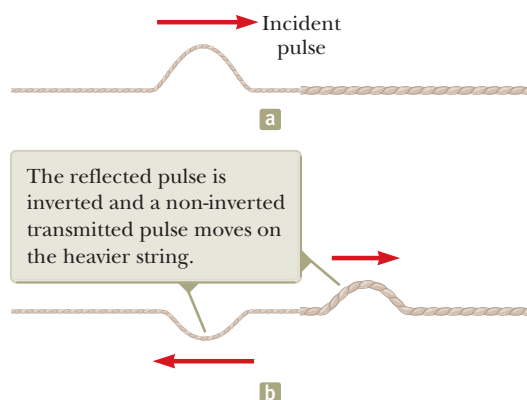


Figure 16.15 (a) A pulse traveling to the right on a light string approaches the junction with a heavier string. (b) The situation after the pulse reaches the junction.

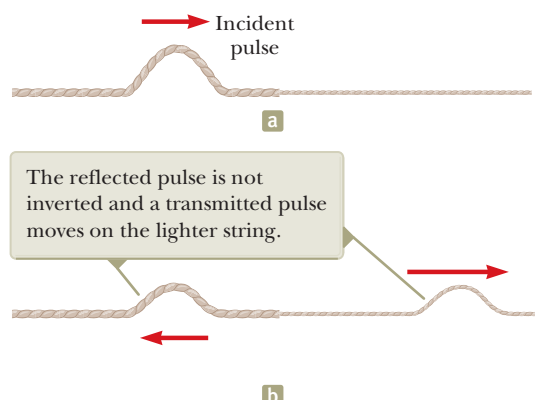


Figure 16.16 (a) A pulse traveling to the right on a heavy string approaches the junction with a lighter string. (b) The situation after the pulse reaches the junction.

According to Equation 16.18, the speed of a wave on a string increases as the mass per unit length of the string decreases. In other words, a wave travels more rapidly on a light string than on a heavy string if both are under the same tension. The following general rules apply to reflected waves: When a wave or pulse travels from medium A to medium B and $v_A > v_B$ (that is, when B is denser than A), it is inverted upon reflection. When a wave or pulse travels from medium A to medium B and $v_A < v_B$ (that is, when A is denser than B), it is not inverted upon reflection.

16.5 Rate of Energy Transfer by Sinusoidal Waves on Strings

Waves transport energy through a medium as they propagate. For example, suppose an object is hanging on a stretched string and a pulse is sent down the string as in Figure 16.17a. When the pulse meets the suspended object, the object is momentarily displaced upward as in Figure 16.17b. In the process, energy is transferred to the object and appears as an increase in the gravitational potential energy of the object–Earth system. This section examines the rate at which energy is transported along a string. We shall assume a one-dimensional sinusoidal wave in the calculation of the energy transferred.

Consider a sinusoidal wave traveling on a string (Fig. 16.18). The source of the energy is some external agent at the left end of the string. We can consider the string to be a nonisolated system. As the external agent performs work on the end of the string, moving it up and down, energy enters the system of the string and propagates along its length. Let's focus our attention on an infinitesimal element of the string of length dx and mass dm . Each such element oscillates vertically with its position described by Equation 15.6. Therefore, we can model each element of the string as a particle in simple harmonic motion, with the oscillation in the y direction. All elements have the same angular frequency ω and the same amplitude A . The kinetic energy K associated with a moving particle is $K = \frac{1}{2}mv^2$. If we apply this equation to the infinitesimal element, the kinetic energy dK associated with the up and down motion of this element is

$$dK = \frac{1}{2}(dm)v_y^2$$

where v_y is the transverse speed of the element. If μ is the mass per unit length of the string, the mass dm of the element of length dx is equal to μdx . Hence, we can express the kinetic energy of an element of the string as

$$dK = \frac{1}{2}(\mu dx)v_y^2 \quad (16.19)$$

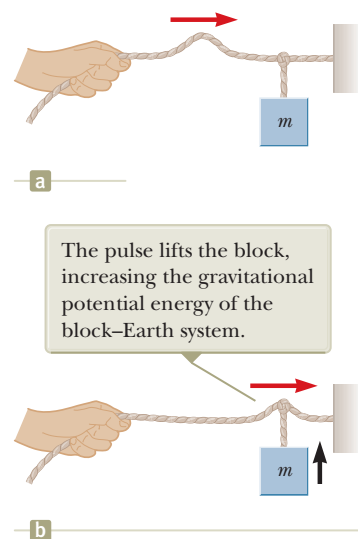


Figure 16.17 (a) A pulse travels to the right on a stretched string, carrying energy with it. (b) The energy of the pulse arrives at the hanging block.

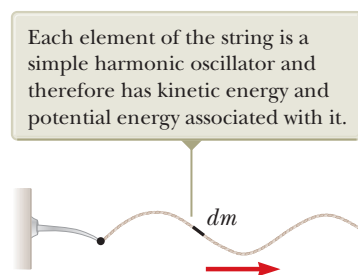


Figure 16.18 A sinusoidal wave traveling along the x axis on a stretched string.

Substituting for the general transverse speed of an element of the medium using Equation 16.14 gives

$$dK = \frac{1}{2}\mu[-\omega A \cos(kx - \omega t)]^2 dx = \frac{1}{2}\mu\omega^2 A^2 \cos^2(kx - \omega t) dx$$

If we take a snapshot of the wave at time $t = 0$, the kinetic energy of a given element is

$$dK = \frac{1}{2}\mu\omega^2 A^2 \cos^2 kx dx$$

Integrating this expression over all the string elements in a wavelength of the wave gives the total kinetic energy K_λ in one wavelength:

$$\begin{aligned} K_\lambda &= \int dK = \int_0^\lambda \frac{1}{2}\mu\omega^2 A^2 \cos^2 kx dx = \frac{1}{2}\mu\omega^2 A^2 \int_0^\lambda \cos^2 kx dx \\ &= \frac{1}{2}\mu\omega^2 A^2 \left[\frac{1}{2}x + \frac{1}{4k} \sin 2kx \right]_0^\lambda = \frac{1}{2}\mu\omega^2 A^2 \left[\frac{1}{2}\lambda \right] = \frac{1}{4}\mu\omega^2 A^2 \lambda \end{aligned}$$

In addition to kinetic energy, there is potential energy associated with each element of the string due to its displacement from the equilibrium position and the restoring forces from neighboring elements. A similar analysis to that above for the total potential energy U_λ in one wavelength gives exactly the same result:

$$U_\lambda = \frac{1}{4}\mu\omega^2 A^2 \lambda$$

The total energy in one wavelength of the wave is the sum of the potential and kinetic energies:

$$E_\lambda = U_\lambda + K_\lambda = \frac{1}{2}\mu\omega^2 A^2 \lambda \quad (16.20)$$

As the wave moves along the string, this amount of energy passes by a given point on the string during a time interval of one period of the oscillation. Therefore, the power P , or rate of energy transfer T_{MW} associated with the mechanical wave, is

$$P = \frac{T_{\text{MW}}}{\Delta t} = \frac{E_\lambda}{T} = \frac{\frac{1}{2}\mu\omega^2 A^2 \lambda}{T} = \frac{1}{2}\mu\omega^2 A^2 \left(\frac{\lambda}{T} \right)$$

Power of a wave ►

$$P = \frac{1}{2}\mu\omega^2 A^2 v \quad (16.21)$$

Equation 16.21 shows that the rate of energy transfer by a sinusoidal wave on a string is proportional to (a) the square of the frequency, (b) the square of the amplitude, and (c) the wave speed. In fact, the rate of energy transfer in *any* sinusoidal wave is proportional to the square of the angular frequency and to the square of the amplitude.

- Quick Quiz 16.5** Which of the following, taken by itself, would be most effective in increasing the rate at which energy is transferred by a wave traveling along a string? (a) reducing the linear mass density of the string by one half (b) doubling the wavelength of the wave (c) doubling the tension in the string (d) doubling the amplitude of the wave

Example 16.5 Power Supplied to a Vibrating String

A taut string for which $\mu = 5.00 \times 10^{-2}$ kg/m is under a tension of 80.0 N. How much power must be supplied to the string to generate sinusoidal waves at a frequency of 60.0 Hz and an amplitude of 6.00 cm?

SOLUTION

Conceptualize Consider Figure 16.10 again and notice that the vibrating blade supplies energy to the string at a certain rate. This energy then propagates to the right along the string.

▶ 16.5 continued

Categorize We evaluate quantities from equations developed in the chapter, so we categorize this example as a substitution problem.

Use Equation 16.21 to evaluate the power: $P = \frac{1}{2}\mu\omega^2 A^2 v$

Use Equations 16.9 and 16.18 to substitute for ω and v : $P = \frac{1}{2}\mu(2\pi f)^2 A^2 \left(\sqrt{\frac{T}{\mu}}\right) = 2\pi^2 f^2 A^2 \sqrt{\mu T}$

Substitute numerical values: $P = 2\pi^2(60.0 \text{ Hz})^2(0.0600 \text{ m})^2 \sqrt{(0.0500 \text{ kg/m})(80.0 \text{ N})} = 512 \text{ W}$

WHAT IF? What if the string is to transfer energy at a rate of 1 000 W? What must be the required amplitude if all other parameters remain the same?

Answer Let us set up a ratio of the new and old power, reflecting only a change in the amplitude:

$$\frac{P_{\text{new}}}{P_{\text{old}}} = \frac{\frac{1}{2}\mu\omega^2 A_{\text{new}}^2 v}{\frac{1}{2}\mu\omega^2 A_{\text{old}}^2 v} = \frac{A_{\text{new}}^2}{A_{\text{old}}^2}$$

Solving for the new amplitude gives

$$A_{\text{new}} = A_{\text{old}} \sqrt{\frac{P_{\text{new}}}{P_{\text{old}}}} = (6.00 \text{ cm}) \sqrt{\frac{1\,000 \text{ W}}{512 \text{ W}}} = 8.39 \text{ cm}$$

16.6 The Linear Wave Equation

In Section 16.1, we introduced the concept of the wave function to represent waves traveling on a string. All wave functions $y(x, t)$ represent solutions of an equation called the *linear wave equation*. This equation gives a complete description of the wave motion, and from it one can derive an expression for the wave speed. Furthermore, the linear wave equation is basic to many forms of wave motion. In this section, we derive this equation as applied to waves on strings.

Suppose a traveling wave is propagating along a string that is under a tension T . Let's consider one small string element of length Δx (Fig. 16.19). The ends of the element make small angles θ_A and θ_B with the x axis. Forces act on the string at its ends where it connects to neighboring elements. Therefore, the element is modeled as a particle under a net force. The net force acting on the element in the vertical direction is

$$\sum F_y = T \sin \theta_B - T \sin \theta_A = T(\sin \theta_B - \sin \theta_A)$$

Because the angles are small, we can use the approximation $\sin \theta \approx \tan \theta$ to express the net force as

$$\sum F_y \approx T(\tan \theta_B - \tan \theta_A) \quad (16.22)$$

Imagine undergoing an infinitesimal displacement outward from the right end of the rope element in Figure 16.19 along the blue line representing the force \vec{T} . This displacement has infinitesimal x and y components and can be represented by the vector $dx\hat{i} + dy\hat{j}$. The tangent of the angle with respect to the x axis for this displacement is dy/dx . Because we evaluate this tangent at a particular instant of time, we must express it in partial form as $\partial y/\partial x$. Substituting for the tangents in Equation 16.22 gives

$$\sum F_y \approx T \left[\left(\frac{\partial y}{\partial x} \right)_B - \left(\frac{\partial y}{\partial x} \right)_A \right] \quad (16.23)$$

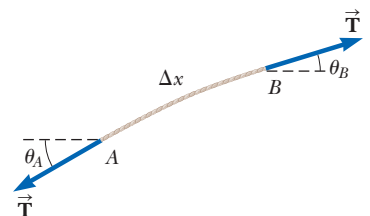


Figure 16.19 An element of a string under tension T .

Now, from the particle under a net force model, let's apply Newton's second law to the element, with the mass of the element given by $m = \mu \Delta x$:

$$\sum F_y = ma_y = \mu \Delta x \left(\frac{\partial^2 y}{\partial t^2} \right) \quad (16.24)$$

Combining Equation 16.23 with Equation 16.24 gives

$$\begin{aligned} \mu \Delta x \left(\frac{\partial^2 y}{\partial t^2} \right) &= T \left[\left(\frac{\partial y}{\partial x} \right)_B - \left(\frac{\partial y}{\partial x} \right)_A \right] \\ \frac{\mu}{T} \frac{\partial^2 y}{\partial t^2} &= \frac{(\partial y / \partial x)_B - (\partial y / \partial x)_A}{\Delta x} \end{aligned} \quad (16.25)$$

The right side of Equation 16.25 can be expressed in a different form if we note that the partial derivative of any function is defined as

$$\frac{\partial f}{\partial x} \equiv \lim_{\Delta x \rightarrow 0} \frac{f(x + \Delta x) - f(x)}{\Delta x}$$

Associating $f(x + \Delta x)$ with $(\partial y / \partial x)_B$ and $f(x)$ with $(\partial y / \partial x)_A$, we see that, in the limit $\Delta x \rightarrow 0$, Equation 16.25 becomes

Linear wave equation for a string \blacktriangleright

$$\frac{\mu}{T} \frac{\partial^2 y}{\partial t^2} = \frac{\partial^2 y}{\partial x^2} \quad (16.26)$$

This expression is the linear wave equation as it applies to waves on a string.

The linear wave equation (Eq. 16.26) is often written in the form

Linear wave equation in general \blacktriangleright

$$\frac{\partial^2 y}{\partial x^2} = \frac{1}{v^2} \frac{\partial^2 y}{\partial t^2} \quad (16.27)$$

Equation 16.27 applies in general to various types of traveling waves. For waves on strings, y represents the vertical position of elements of the string. For sound waves propagating through a gas, y corresponds to longitudinal position of elements of the gas from equilibrium or variations in either the pressure or the density of the gas. In the case of electromagnetic waves, y corresponds to electric or magnetic field components.

We have shown that the sinusoidal wave function (Eq. 16.10) is one solution of the linear wave equation (Eq. 16.27). Although we do not prove it here, the linear wave equation is satisfied by *any* wave function having the form $y = f(x \pm vt)$. Furthermore, we have seen that the linear wave equation is a direct consequence of the particle under a net force model applied to any element of a string carrying a traveling wave.

Summary

Definitions

■ A one-dimensional **sinusoidal wave** is one for which the positions of the elements of the medium vary sinusoidally. A sinusoidal wave traveling to the right can be expressed with a **wave function**

$$y(x, t) = A \sin \left[\frac{2\pi}{\lambda} (x - vt) \right] \quad (16.5)$$

where A is the **amplitude**, λ is the **wavelength**, and v is the **wave speed**.

■ The **angular wave number** k and **angular frequency** ω of a wave are defined as follows:

$$k \equiv \frac{2\pi}{\lambda} \quad (16.8)$$

$$\omega \equiv \frac{2\pi}{T} = 2\pi f \quad (16.9)$$

where T is the **period** of the wave and f is its **frequency**.

■ A **transverse wave** is one in which the elements of the medium move in a direction *perpendicular* to the direction of propagation.

■ A **longitudinal wave** is one in which the elements of the medium move in a direction *parallel* to the direction of propagation.

Concepts and Principles

■ Any one-dimensional wave traveling with a speed v in the x direction can be represented by a wave function of the form

$$y(x, t) = f(x \pm vt) \quad (16.1, 16.2)$$

where the positive sign applies to a wave traveling in the negative x direction and the negative sign applies to a wave traveling in the positive x direction. The shape of the wave at any instant in time (a snapshot of the wave) is obtained by holding t constant.

■ The speed of a wave traveling on a taut string of mass per unit length μ and tension T is

$$v = \sqrt{\frac{T}{\mu}} \quad (16.18)$$

■ A wave is totally or partially reflected when it reaches the end of the medium in which it propagates or when it reaches a boundary where its speed changes discontinuously. If a wave traveling on a string meets a fixed end, the wave is reflected and inverted. If the wave reaches a free end, it is reflected but not inverted.

■ The **power** transmitted by a sinusoidal wave on a stretched string is

$$P = \frac{1}{2} \mu \omega^2 A^2 v \quad (16.21)$$

■ Wave functions are solutions to a differential equation called the **linear wave equation**:

$$\frac{\partial^2 y}{\partial x^2} = \frac{1}{v^2} \frac{\partial^2 y}{\partial t^2} \quad (16.27)$$

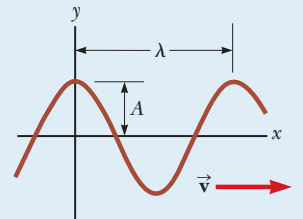
Analysis Model for Problem Solving

■ **Traveling Wave.** The wave speed of a sinusoidal wave is

$$v = \frac{\lambda}{T} = \lambda f \quad (16.6, 16.12)$$

A sinusoidal wave can be expressed as

$$y = A \sin(kx - \omega t) \quad (16.10)$$



Objective Questions

1. denotes answer available in *Student Solutions Manual/Study Guide*

- If one end of a heavy rope is attached to one end of a lightweight rope, a wave can move from the heavy rope into the lighter one. (i) What happens to the speed of the wave? (a) It increases. (b) It decreases. (c) It is constant. (d) It changes unpredictably. (ii) What happens to the frequency? Choose from the same possibilities. (iii) What happens to the wavelength? Choose from the same possibilities.
1. If you stretch a rubber hose and pluck it, you can observe a pulse traveling up and down the hose. (i) What happens to the speed of the pulse if you stretch the hose more tightly? (a) It increases. (b) It decreases. (c) It is constant. (d) It changes unpredictably. (ii) What happens to the speed if you fill the hose with water? Choose from the same possibilities.
3. Rank the waves represented by the following functions from the largest to the smallest according to (i) their amplitudes, (ii) their wavelengths, (iii) their frequencies, (iv) their periods, and (v) their speeds. If the values of a quantity are equal for two waves, show them as having equal rank. For all functions, x and y are in meters and t is in seconds. (a) $y = 4 \sin(3x - 15t)$ (b) $y = 6 \cos(3x + 15t - 2)$ (c) $y = 8 \sin(2x + 15t)$ (d) $y = 8 \cos(4x + 20t)$ (e) $y = 7 \sin(6x - 24t)$
4. By what factor would you have to multiply the tension in a stretched string so as to double the wave speed?

Assume the string does not stretch. (a) a factor of 8 (b) a factor of 4 (c) a factor of 2 (d) a factor of 0.5 (e) You could not change the speed by a predictable factor by changing the tension.

5. When all the strings on a guitar (Fig. OQ16.5) are stretched to the same tension, will the speed of a wave along the most massive bass string be (a) faster, (b) slower, or (c) the same as the speed of a wave on the lighter strings? Alternatively, (d) is the speed on the bass string not necessarily any of these answers?



Figure OQ16.5

6. Which of the following statements is not necessarily true regarding mechanical waves? (a) They are formed

by some source of disturbance. (b) They are sinusoidal in nature. (c) They carry energy. (d) They require a medium through which to propagate. (e) The wave speed depends on the properties of the medium in which they travel.

7. (a) Can a wave on a string move with a wave speed that is greater than the maximum transverse speed $v_{y,\max}$ of an element of the string? (b) Can the wave speed be much greater than the maximum element speed? (c) Can the wave speed be equal to the maximum element speed? (d) Can the wave speed be less than $v_{y,\max}$?
8. A source vibrating at constant frequency generates a sinusoidal wave on a string under constant tension. If the power delivered to the string is doubled, by what factor does the amplitude change? (a) a factor of 4 (b) a factor of 2 (c) a factor of $\sqrt{2}$ (d) a factor of 0.707 (e) cannot be predicted
9. The distance between two successive peaks of a sinusoidal wave traveling along a string is 2 m. If the frequency of this wave is 4 Hz, what is the speed of the wave? (a) 4 m/s (b) 1 m/s (c) 8 m/s (d) 2 m/s (e) impossible to answer from the information given

Conceptual Questions

1. denotes answer available in *Student Solutions Manual/Study Guide*

1. Why is a solid substance able to transport both longitudinal waves and transverse waves, but a homogeneous fluid is able to transport only longitudinal waves?
2. (a) How would you create a longitudinal wave in a stretched spring? (b) Would it be possible to create a transverse wave in a spring?
3. When a pulse travels on a taut string, does it always invert upon reflection? Explain.
4. In mechanics, massless strings are often assumed. Why is that not a good assumption when discussing waves on strings?
5. If you steadily shake one end of a taut rope three times each second, what would be the period of the sinusoidal wave set up in the rope?
6. (a) If a long rope is hung from a ceiling and waves are sent up the rope from its lower end, why does the speed of the waves change as they ascend? (b) Does the speed of the ascending waves increase or decrease? Explain.

7. Why is a pulse on a string considered to be transverse?
8. Does the vertical speed of an element of a horizontal, taut string, through which a wave is traveling, depend on the wave speed? Explain.
9. In an earthquake, both S (transverse) and P (longitudinal) waves propagate from the focus of the earthquake. The focus is in the ground radially below the epicenter on the surface (Fig. CQ16.9). Assume the waves move in straight lines through uniform material. The S waves travel through the Earth more slowly than the P waves (at about 5 km/s versus 8 km/s). By detecting the time of arrival of the waves at a seismograph, (a) how can one determine the distance to the focus of the earthquake? (b) How many detection stations are necessary to locate the focus unambiguously?

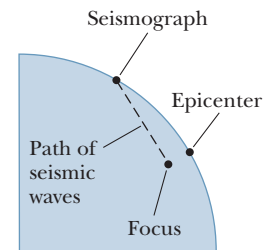


Figure CQ16.9

Problems

WebAssign The problems found in this chapter may be assigned online in Enhanced WebAssign

1. straightforward; 2. intermediate; 3. challenging

1. full solution available in the *Student Solutions Manual/Study Guide*

AMT Analysis Model tutorial available in Enhanced WebAssign

GP Guided Problem

M Master It tutorial available in Enhanced WebAssign

W Watch It video solution available in Enhanced WebAssign

Section 16.1 Propagation of a Disturbance

1. A seismographic station receives S and P waves from an earthquake, separated in time by 17.3 s. Assume the waves have traveled over the same path at speeds of 4.50 km/s and 7.80 km/s. Find the distance from the seismograph to the focus of the quake.
2. Ocean waves with a crest-to-crest distance of 10.0 m can be described by the wave function

$$y(x, t) = 0.800 \sin [0.628(x - vt)]$$

where x and y are in meters, t is in seconds, and $v = 1.20$ m/s. (a) Sketch $y(x, t)$ at $t = 0$. (b) Sketch $y(x, t)$ at $t = 2.00$ s. (c) Compare the graph in part (b) with that for part (a) and explain similarities and differences. (d) How has the wave moved between graph (a) and graph (b)?

3. At $t = 0$, a transverse pulse in a wire is described by the function

$$y = \frac{6.00}{x^2 + 3.00}$$

where x and y are in meters. If the pulse is traveling in the positive x direction with a speed of 4.50 m/s, write the function $y(x, t)$ that describes this pulse.

4. Two points A and B on the surface of the Earth are at the same longitude and 60.0° apart in latitude as shown in Figure P16.4. Suppose an earthquake at point A creates a P wave that reaches point B by traveling straight through the body of the Earth at a constant speed of 7.80 km/s. The earthquake also radiates a Rayleigh wave that travels at 4.50 km/s. In addition to P and S waves, Rayleigh waves are a third type of seismic wave that travels along the *surface* of the Earth rather than through the *bulk* of the Earth. (a) Which of these two seismic waves arrives at B first? (b) What is the time difference between the arrivals of these two waves at B ?

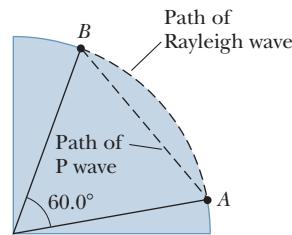


Figure P16.4

Section 16.2 Analysis Model: Traveling Wave

5. A wave is described by $y = 0.020 \sin(kx - \omega t)$, where $k = 2.11$ rad/m, $\omega = 3.62$ rad/s, x and y are in meters, and t is in seconds. Determine (a) the amplitude, (b) the wavelength, (c) the frequency, and (d) the speed of the wave.
6. A certain uniform string is held under constant tension. (a) Draw a side-view snapshot of a sinusoidal wave on a string as shown in diagrams in the text. (b) Immediately below diagram (a), draw the same wave at a moment later by one-quarter of the period of the wave. (c) Then, draw a wave with an amplitude 1.5 times larger than the wave in diagram (a). (d) Next, draw a wave differing from the one in your diagram (a) just by having a wavelength 1.5 times larger. (e) Finally, draw a wave differing from that in diagram (a) just by having a frequency 1.5 times larger.

7. A sinusoidal wave is traveling along a rope. The oscillator that generates the wave completes 40.0 vibrations in 30.0 s. A given crest of the wave travels 425 cm along the rope in 10.0 s. What is the wavelength of the wave?
8. For a certain transverse wave, the distance between two successive crests is 1.20 m, and eight crests pass a given point along the direction of travel every 12.0 s. Calculate the wave speed.
9. The wave function for a traveling wave on a taut string is (in SI units)

$$y(x, t) = 0.350 \sin \left(10\pi t - 3\pi x + \frac{\pi}{4} \right)$$

- (a) What are the speed and direction of travel of the wave? (b) What is the vertical position of an element of the string at $t = 0$, $x = 0.100$ m? What are (c) the wavelength and (d) the frequency of the wave? (e) What is the maximum transverse speed of an element of the string?
10. When a particular wire is vibrating with a frequency of 4.00 Hz, a transverse wave of wavelength 60.0 cm is produced. Determine the speed of waves along the wire.
11. The string shown in Figure P16.11 is driven at a frequency of 5.00 Hz. The amplitude of the motion is $A = 12.0$ cm, and the wave speed is $v = 20.0$ m/s. Furthermore, the wave is such that $y = 0$ at $x = 0$ and $t = 0$. Determine (a) the angular frequency and (b) the wave number for this wave. (c) Write an expression for the wave function. Calculate (d) the maximum transverse speed and (e) the maximum transverse acceleration of an element of the string.

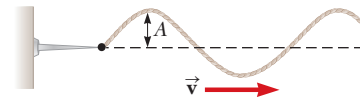


Figure P16.11

12. Consider the sinusoidal wave of Example 16.2 with the wave function

$$y = 0.150 \cos(15.7x - 50.3t)$$

- where x and y are in meters and t is in seconds. At a certain instant, let point A be at the origin and point B be the closest point to A along the x axis where the wave is 60.0° out of phase with A . What is the coordinate of B ?
13. A sinusoidal wave of wavelength 2.00 m and amplitude 0.100 m travels on a string with a speed of 1.00 m/s to the right. At $t = 0$, the left end of the string is at the origin. For this wave, find (a) the frequency, (b) the angular frequency, (c) the angular wave number, and (d) the wave function in SI units. Determine the equation of motion in SI units for (e) the left end of the string and (f) the point on the string at $x = 1.50$ m to the right of the left end. (g) What is the maximum speed of any element of the string?
14. (a) Plot y versus t at $x = 0$ for a sinusoidal wave of the form $y = 0.150 \cos(15.7x - 50.3t)$, where x and y are in

meters and t is in seconds. (b) Determine the period of vibration. (c) State how your result compares with the value found in Example 16.2.

15. A transverse wave on a string is described by the wave function

$$y = 0.120 \sin\left(\frac{\pi}{8}x + 4\pi t\right)$$

where x and y are in meters and t is in seconds. Determine (a) the transverse speed and (b) the transverse acceleration at $t = 0.200$ s for an element of the string located at $x = 1.60$ m. What are (c) the wavelength, (d) the period, and (e) the speed of propagation of this wave?

16. A wave on a string is described by the wave function $y = 0.100 \sin(0.50x - 20t)$, where x and y are in meters and t is in seconds. (a) Show that an element of the string at $x = 2.00$ m executes harmonic motion. (b) Determine the frequency of oscillation of this particular element.

17. A sinusoidal wave is described by the wave function $y = 0.25 \sin(0.30x - 40t)$ where x and y are in meters and t is in seconds. Determine for this wave (a) the amplitude, (b) the angular frequency, (c) the angular wave number, (d) the wavelength, (e) the wave speed, and (f) the direction of motion.

18. A sinusoidal wave traveling in the negative x direction (to the left) has an amplitude of 20.0 cm, a wavelength of 35.0 cm, and a frequency of 12.0 Hz. The transverse position of an element of the medium at $t = 0$, $x = 0$ is $y = -3.00$ cm, and the element has a positive velocity here. We wish to find an expression for the wave function describing this wave. (a) Sketch the wave at $t = 0$. (b) Find the angular wave number k from the wavelength. (c) Find the period T from the frequency. Find (d) the angular frequency ω and (e) the wave speed v . (f) From the information about $t = 0$, find the phase constant ϕ . (g) Write an expression for the wave function $y(x, t)$.

19. (a) Write the expression for y as a function of x and t in SI units for a sinusoidal wave traveling along a rope in the negative x direction with the following characteristics: $A = 8.00$ cm, $\lambda = 80.0$ cm, $f = 3.00$ Hz, and $y(0, t) = 0$ at $t = 0$. (b) **What If?** Write the expression for y as a function of x and t for the wave in part (a) assuming $y(x, 0) = 0$ at the point $x = 10.0$ cm.

20. A transverse sinusoidal wave on a string has a period $T = 25.0$ ms and travels in the negative x direction with a speed of 30.0 m/s. At $t = 0$, an element of the string at $x = 0$ has a transverse position of 2.00 cm and is traveling downward with a speed of 2.00 m/s. (a) What is the amplitude of the wave? (b) What is the initial phase angle? (c) What is the maximum transverse speed of an element of the string? (d) Write the wave function for the wave.

Section 16.3 The Speed of Waves on Strings

21. **Review.** The elastic limit of a steel wire is 2.70×10^8 Pa. What is the maximum speed at which transverse wave

pulses can propagate along this wire without exceeding this stress? (The density of steel is 7.86×10^3 kg/m³.)

22. A piano string having a mass per unit length equal to 5.00×10^{-3} kg/m is under a tension of 1 350 N. Find the speed with which a wave travels on this string.

23. Transverse waves travel with a speed of 20.0 m/s on a string under a tension of 6.00 N. What tension is required for a wave speed of 30.0 m/s on the same string?

24. A student taking a quiz finds on a reference sheet the two equations

$$f = \frac{1}{T} \quad \text{and} \quad v = \sqrt{\frac{T}{\mu}}$$

She has forgotten what T represents in each equation. (a) Use dimensional analysis to determine the units required for T in each equation. (b) Explain how you can identify the physical quantity each T represents from the units.

25. An Ethernet cable is 4.00 m long. The cable has a mass of 0.200 kg. A transverse pulse is produced by plucking one end of the taut cable. The pulse makes four trips down and back along the cable in 0.800 s. What is the tension in the cable?

26. A transverse traveling wave on a taut wire has an amplitude of 0.200 mm and a frequency of 500 Hz. It travels with a speed of 196 m/s. (a) Write an equation in SI units of the form $y = A \sin(kx - \omega t)$ for this wave. (b) The mass per unit length of this wire is 4.10 g/m. Find the tension in the wire.

27. A steel wire of length 30.0 m and a copper wire of length 20.0 m, both with 1.00-mm diameters, are connected end to end and stretched to a tension of 150 N. During what time interval will a transverse wave travel the entire length of the two wires?

28. *Why is the following situation impossible?* An astronaut on the Moon is studying wave motion using the apparatus discussed in Example 16.3 and shown in Figure 16.12. He measures the time interval for pulses to travel along the horizontal wire. Assume the horizontal wire has a mass of 4.00 g and a length of 1.60 m and assume a 3.00-kg object is suspended from its extension around the pulley. The astronaut finds that a pulse requires 26.1 ms to traverse the length of the wire.

29. Tension is maintained in a string as in Figure P16.29. The observed wave speed is $v = 24.0$ m/s when the suspended mass is $m = 3.00$ kg. (a) What is the mass per unit length of the string? (b) What is the wave speed when the suspended mass is $m = 2.00$ kg?

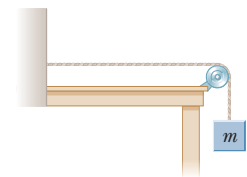


Figure P16.29
Problems 29 and 47.

30. **Review.** A light string with a mass per unit length of 8.00 g/m has its ends tied to two walls separated by a distance equal to three-fourths the length of the string (Fig. P16.30, p. 503). An object of mass m is suspended from the center of the string, putting a tension in the string. (a) Find an expression for the transverse wave

speed in the string as a function of the mass of the hanging object. (b) What should be the mass of the object suspended from the string if the wave speed is to be 60.0 m/s?

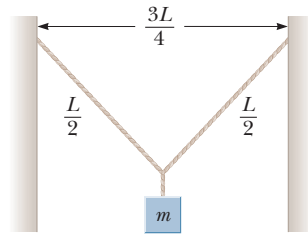


Figure P16.30

- 31.** Transverse pulses travel with a speed of 200 m/s along a taut copper wire whose diameter is 1.50 mm. What is the tension in the wire? (The density of copper is 8.92 g/cm³.)

Section 16.5 Rate of Energy Transfer by Sinusoidal Waves on Strings

- 32.** In a region far from the epicenter of an earthquake, a seismic wave can be modeled as transporting energy in a single direction without absorption, just as a string wave does. Suppose the seismic wave moves from granite into mudfill with similar density but with a much smaller bulk modulus. Assume the speed of the wave gradually drops by a factor of 25.0, with negligible reflection of the wave. (a) Explain whether the amplitude of the ground shaking will increase or decrease. (b) Does it change by a predictable factor? (This phenomenon led to the collapse of part of the Nimitz Freeway in Oakland, California, during the Loma Prieta earthquake of 1989.)
- 33.** Transverse waves are being generated on a rope under constant tension. By what factor is the required power increased or decreased if (a) the length of the rope is doubled and the angular frequency remains constant, (b) the amplitude is doubled and the angular frequency is halved, (c) both the wavelength and the amplitude are doubled, and (d) both the length of the rope and the wavelength are halved?
- 34.** Sinusoidal waves 5.00 cm in amplitude are to be transmitted along a string that has a linear mass density of 4.00×10^{-2} kg/m. The source can deliver a maximum power of 300 W, and the string is under a tension of 100 N. What is the highest frequency f at which the source can operate?
- 35.** A sinusoidal wave on a string is described by the wave function
- $$y = 0.15 \sin(0.80x - 50t)$$
- where x and y are in meters and t is in seconds. The mass per unit length of this string is 12.0 g/m. Determine (a) the speed of the wave, (b) the wavelength, (c) the frequency, and (d) the power transmitted by the wave.
- 36.** A taut rope has a mass of 0.180 kg and a length of 3.60 m. What power must be supplied to the rope so as to generate sinusoidal waves having an amplitude of 0.100 m and a wavelength of 0.500 m and traveling with a speed of 30.0 m/s?
- 37.** A long string carries a wave; a 6.00-m segment of the string contains four complete wavelengths and has a

mass of 180 g. The string vibrates sinusoidally with a frequency of 50.0 Hz and a peak-to-valley displacement of 15.0 cm. (The “peak-to-valley” distance is the vertical distance from the farthest positive position to the farthest negative position.) (a) Write the function that describes this wave traveling in the positive x direction. (b) Determine the power being supplied to the string.

- 38.** A horizontal string can transmit a maximum power P_0 (without breaking) if a wave with amplitude A and angular frequency ω is traveling along it. To increase this maximum power, a student folds the string and uses this “double string” as a medium. Assuming the tension in the two strands together is the same as the original tension in the single string and the angular frequency of the wave remains the same, determine the maximum power that can be transmitted along the “double string.”

- 39.** The wave function for a wave on a taut string is

$$y(x, t) = 0.350 \sin\left(10\pi t - 3\pi x + \frac{\pi}{4}\right)$$

where x and y are in meters and t is in seconds. If the linear mass density of the string is 75.0 g/m, (a) what is the average rate at which energy is transmitted along the string? (b) What is the energy contained in each cycle of the wave?

- 40.** A two-dimensional water wave spreads in circular ripples. Show that the amplitude A at a distance r from the initial disturbance is proportional to $1/\sqrt{r}$. *Suggestion:* Consider the energy carried by one outward-moving ripple.

Section 16.6 The Linear Wave Equation

- 41.** Show that the wave function $y = \ln[b(x - vt)]$ is a solution to Equation 16.27, where b is a constant.
- 42.** (a) Evaluate A in the scalar equality $4(7 + 3) = A$. (b) Evaluate A , B , and C in the vector equality $700\hat{i} + 3.00\hat{k} = A\hat{i} + B\hat{j} + C\hat{k}$. (c) Explain how you arrive at the answers to convince a student who thinks that you cannot solve a single equation for three different unknowns. (d) **What If?** The functional equality or identity
- $$A + B \cos(Cx + Dt + E) = 7.00 \cos(3x + 4t + 2)$$
- is true for all values of the variables x and t , measured in meters and in seconds, respectively. Evaluate the constants A , B , C , D , and E . (e) Explain how you arrive at your answers to part (d).
- 43.** Show that the wave function $y = e^{b(x-vt)}$ is a solution of the linear wave equation (Eq. 16.27), where b is a constant.
- 44.** (a) Show that the function $y(x, t) = x^2 + v^2 t^2$ is a solution to the wave equation. (b) Show that the function in part (a) can be written as $f(x + vt) + g(x - vt)$ and determine the functional forms for f and g . (c) **What If?** Repeat parts (a) and (b) for the function $y(x, t) = \sin(x) \cos(vt)$.

Additional Problems

- 45.** Motion-picture film is projected at a frequency of 24.0 frames per second. Each photograph on the film is the

same height of 19.0 mm, just like each oscillation in a wave is the same length. Model the height of a frame as the wavelength of a wave. At what constant speed does the film pass into the projector?

46. “The wave” is a particular type of pulse that can propagate through a large crowd gathered at a sports arena (Fig. P16.46). The elements of the medium are the spectators, with zero position corresponding to their being seated and maximum position corresponding to their standing and raising their arms. When a large fraction of the spectators participates in the wave motion, a somewhat stable pulse shape can develop. The wave speed depends on people’s reaction time, which is typically on the order of 0.1 s. Estimate the order of magnitude, in minutes, of the time interval required for such a pulse to make one circuit around a large sports stadium. State the quantities you measure or estimate and their values.



Figure P16.46

47. A sinusoidal wave in a rope is described by the wave function

$$y = 0.20 \sin (0.75\pi x + 18\pi t)$$

where x and y are in meters and t is in seconds. The rope has a linear mass density of 0.250 kg/m. The tension in the rope is provided by an arrangement like the one illustrated in Figure P16.29. What is the mass of the suspended object?

48. The ocean floor is underlain by a layer of basalt that constitutes the crust, or uppermost layer, of the Earth in that region. Below this crust is found denser periodotite rock that forms the Earth’s mantle. The boundary between these two layers is called the Mohorovicic discontinuity (“Moho” for short). If an explosive charge is set off at the surface of the basalt, it generates a seismic wave that is reflected back out at the Moho. If the speed of this wave in basalt is 6.50 km/s and the two-way travel time is 1.85 s, what is the thickness of this oceanic crust?

49. **Review.** A 2.00-kg block hangs from a rubber cord, being supported so that the cord is not stretched. The unstretched length of the cord is 0.500 m, and its mass is 5.00 g. The “spring constant” for the cord is 100 N/m. The block is released and stops momentarily at the lowest point. (a) Determine the tension in the cord when the block is at this lowest point. (b) What is the length of the cord in this “stretched” position? (c) If the block

is held in this lowest position, find the speed of a transverse wave in the cord.

50. **Review.** A block of mass M hangs from a rubber cord. The block is supported so that the cord is not stretched. The unstretched length of the cord is L_0 , and its mass is m , much less than M . The “spring constant” for the cord is k . The block is released and stops momentarily at the lowest point. (a) Determine the tension in the string when the block is at this lowest point. (b) What is the length of the cord in this “stretched” position? (c) If the block is held in this lowest position, find the speed of a transverse wave in the cord.

51. A transverse wave on a string is described by the wave function

$$y(x, t) = 0.350 \sin (1.25x + 99.6t)$$

where x and y are in meters and t is in seconds. Consider the element of the string at $x = 0$. (a) What is the time interval between the first two instants when this element has a position of $y = 0.175$ m? (b) What distance does the wave travel during the time interval found in part (a)?

52. A sinusoidal wave in a string is described by the wave function

$$y = 0.150 \sin (0.800x - 50.0t)$$

where x and y are in meters and t is in seconds. The mass per length of the string is 12.0 g/m. (a) Find the maximum transverse acceleration of an element of this string. (b) Determine the maximum transverse force on a 1.00-cm segment of the string. (c) State how the force found in part (b) compares with the tension in the string.

53. **Review.** A block of mass M , supported by a string, rests on a frictionless incline making an angle θ with the horizontal (Fig. P16.53). The length of the string is L , and its mass is $m \ll M$. Derive an expression for the time interval required for a transverse wave to travel from one end of the string to the other.

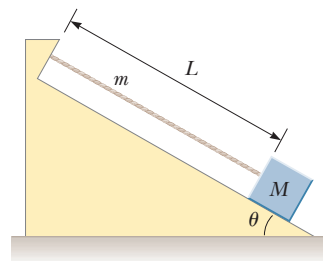


Figure P16.53

54. An undersea earthquake or a landslide can produce an ocean wave of short duration carrying great energy, called a tsunami. When its wavelength is large compared to the ocean depth d , the speed of a water wave is given approximately by $v = \sqrt{gd}$. Assume an earthquake occurs all along a tectonic plate boundary running north to south and produces a straight tsunami wave crest moving everywhere to the west. (a) What physical quantity can you consider to be constant in the motion

of any one wave crest? (b) Explain why the amplitude of the wave increases as the wave approaches shore. (c) If the wave has amplitude 1.80 m when its speed is 200 m/s, what will be its amplitude where the water is 9.00 m deep? (d) Explain why the amplitude at the shore should be expected to be still greater, but cannot be meaningfully predicted by your model.

55. Review. A block of mass $M = 0.450$ kg is attached to one end of a cord of mass 0.00320 kg; the other end of the cord is attached to a fixed point. The block rotates with constant angular speed in a circle on a frictionless, horizontal table as shown in Figure P16.55. Through what angle does the block rotate in the time interval during which a transverse wave travels along the string from the center of the circle to the block?

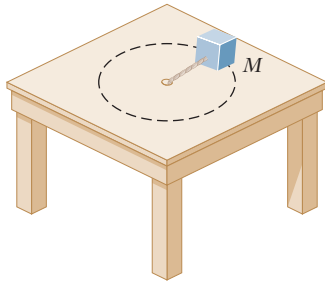


Figure P16.55 Problems 55, 56, and 57.

- 56. Review.** A block of mass $M = 0.450$ kg is attached to one end of a cord of mass $m = 0.00320$ kg; the other end of the cord is attached to a fixed point. The block rotates with constant angular speed $\omega = 10.0$ rad/s in a circle on a frictionless, horizontal table as shown in Figure P16.55. What time interval is required for a transverse wave to travel along the string from the center of the circle to the block?
- 57. Review.** A block of mass M is attached to one end of a cord of mass m ; the other end of the cord is attached to a fixed point. The block rotates with constant angular speed ω in a circle on a frictionless, horizontal table as shown in Figure P16.55. What time interval is required for a transverse wave to travel along the string from the center of the circle to the block?
- 58.** A string with linear density 0.500 g/m is held under tension 20.0 N. As a transverse sinusoidal wave propagates on the string, elements of the string move with maximum speed $v_{y,\max}$. (a) Determine the power transmitted by the wave as a function of $v_{y,\max}$. (b) State in words the proportionality between power and $v_{y,\max}$. (c) Find the energy contained in a section of string 3.00 m long as a function of $v_{y,\max}$. (d) Express the answer to part (c) in terms of the mass m of this section. (e) Find the energy that the wave carries past a point in 6.00 s.
- 59.** A wire of density ρ is tapered so that its cross-sectional area varies with x according to

$$A = 1.00 \times 10^{-5} x + 1.00 \times 10^{-6}$$

where A is in meters squared and x is in meters. The tension in the wire is T . (a) Derive a relationship for

the speed of a wave as a function of position. (b) **What If?** Assume the wire is aluminum and is under a tension $T = 24.0$ N. Determine the wave speed at the origin and at $x = 10.0$ m.

60. A rope of total mass m and length L is suspended vertically. Analysis shows that for short transverse pulses, the waves above a short distance from the free end of the rope can be represented to a good approximation by the linear wave equation discussed in Section 16.6. Show that a transverse pulse travels the length of the rope in a time interval that is given approximately by $\Delta t \approx 2\sqrt{L/g}$. *Suggestion:* First find an expression for the wave speed at any point a distance x from the lower end by considering the rope's tension as resulting from the weight of the segment below that point.

61. A pulse traveling along a string of linear mass density μ is described by the wave function

$$y = [A_0 e^{-bx}] \sin(kx - \omega t)$$

where the factor in brackets is said to be the amplitude. (a) What is the power $P(x)$ carried by this wave at a point x ? (b) What is the power $P(0)$ carried by this wave at the origin? (c) Compute the ratio $P(x)/P(0)$.

62. *Why is the following situation impossible?* Tsunamis are ocean surface waves that have enormous wavelengths (100 to 200 km), and the propagation speed for these waves is $v \approx \sqrt{gd_{\text{avg}}}$, where d_{avg} is the average depth of the water. An earthquake on the ocean floor in the Gulf of Alaska produces a tsunami that reaches Hilo, Hawaii, 4450 km away, in a time interval of 5.88 h. (This method was used in 1856 to estimate the average depth of the Pacific Ocean long before soundings were made to give a direct determination.)

63. Review. An aluminum wire is held between two clamps under zero tension at room temperature. Reducing the temperature, which results in a decrease in the wire's equilibrium length, increases the tension in the wire. Taking the cross-sectional area of the wire to be 5.00×10^{-6} m², the density to be 2.70×10^3 kg/m³, and Young's modulus to be 7.00×10^{10} N/m², what strain ($\Delta L/L$) results in a transverse wave speed of 100 m/s?

Challenge Problems

64. Assume an object of mass M is suspended from the bottom of the rope of mass m and length L in Problem 60. (a) Show that the time interval for a transverse pulse to travel the length of the rope is

$$\Delta t = 2\sqrt{\frac{L}{mg}}(\sqrt{M+m} - \sqrt{M})$$

(b) **What If?** Show that the expression in part (a) reduces to the result of Problem 60 when $M = 0$. (c) Show that for $m \ll M$, the expression in part (a) reduces to

$$\Delta t = \sqrt{\frac{mL}{Mg}}$$

65. A rope of total mass m and length L is suspended vertically. As shown in Problem 60, a pulse travels from the bottom to the top of the rope in an approximate time interval $\Delta t = 2\sqrt{L/g}$ with a speed that varies with position x measured from the bottom of the rope as $v = \sqrt{gx}$. Assume the linear wave equation in Section 16.6 describes waves at all locations on the rope. (a) Over what time interval does a pulse travel half-way up the rope? Give your answer as a fraction of the quantity $2\sqrt{L/g}$. (b) A pulse starts traveling up the rope. How far has it traveled after a time interval $\sqrt{L/g}$?

66. A string on a musical instrument is held under tension T and extends from the point $x = 0$ to the point $x = L$. The string is overwound with wire in such a way that its mass per unit length $\mu(x)$ increases uniformly from μ_0 at $x = 0$ to μ_L at $x = L$. (a) Find an expression for $\mu(x)$ as a function of x over the range $0 \leq x \leq L$. (b) Find an expression for the time interval required for a transverse pulse to travel the length of the string.

67. If a loop of chain is spun at high speed, it can roll along the ground like a circular hoop without collapsing. Consider a chain of uniform linear mass density μ whose center of mass travels to the right at a high speed v_0 as shown in Figure P16.67. (a) Determine the tension in the chain in terms of μ and v_0 . Assume the weight of an individual link is negligible compared to the tension. (b) If the loop rolls over a small bump, the resulting deformation of the chain causes two transverse pulses to propagate along the chain, one moving clockwise and one moving counterclockwise. What is the speed of the pulses traveling along the chain? (c) Through what angle does each pulse travel during the time interval over which the loop makes one revolution?

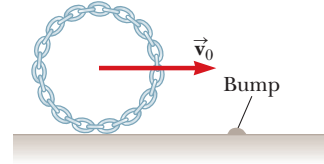


Figure P16.67

Sound Waves

CHAPTER

17



- 17.1 Pressure Variations in Sound Waves
- 17.2 Speed of Sound Waves
- 17.3 Intensity of Periodic Sound Waves
- 17.4 The Doppler Effect

Most of the waves we studied in Chapter 16 are constrained to move along a one-dimensional medium. For example, the wave in Figure 16.7 is a purely mathematical construct moving along the x axis. The wave in Figure 16.10 is constrained to move along the length of the string. We have also seen waves moving through a two-dimensional medium, such as the ripples on the water surface in the introduction to Part 2 on page 449 and the waves moving over the surface of the ocean in Figure 16.4. In this chapter, we investigate mechanical waves that move through three-dimensional bulk media. For example, seismic waves leaving the focus of an earthquake travel through the three-dimensional interior of the Earth.

We will focus our attention on **sound waves**, which travel through any material, but are most commonly experienced as the mechanical waves traveling through air that result in the human perception of hearing. As sound waves travel through air, elements of air are disturbed from their equilibrium positions. Accompanying these movements are changes in density and pressure of the air along the direction of wave motion. If the source of the sound waves vibrates sinusoidally, the density and pressure variations are also sinusoidal. The mathematical description of sinusoidal sound waves is very similar to that of sinusoidal waves on strings, as discussed in Chapter 16.

Sound waves are divided into three categories that cover different frequency ranges.

- (1) *Audible waves* lie within the range of sensitivity of the human ear. They can be generated in a variety of ways, such as by musical instruments, human voices, or loudspeakers.
- (2) *Infrasonic waves* have frequencies below the audible range. Elephants can use infrasonic waves to communicate with one another, even when separated by many kilometers.
- (3) *Ultrasonic waves* have frequencies above the audible range. You may have used a "silent" whistle to retrieve your dog. Dogs easily hear the ultrasonic sound this whistle emits, although humans cannot detect it at all. Ultrasonic waves are also used in medical imaging.

Three musicians play the alpenhorn in Valais, Switzerland. In this chapter, we explore the behavior of sound waves such as those coming from these large musical instruments.

(Stefano Cellai/AGE fotostock)

This chapter begins with a discussion of the pressure variations in a sound wave, the speed of sound waves, and wave intensity, which is a function of wave amplitude. We then provide an alternative description of the intensity of sound waves that compresses the wide range of intensities to which the ear is sensitive into a smaller range for convenience. The effects of the motion of sources and listeners on the frequency of a sound are also investigated.

17.1 Pressure Variations in Sound Waves

In Chapter 16, we began our investigation of waves by imagining the creation of a single pulse that traveled down a string (Figure 16.1) or a spring (Figure 16.3). Let's do something similar for sound. We describe pictorially the motion of a one-dimensional longitudinal sound pulse moving through a long tube containing a compressible gas as shown in Figure 17.1. A piston at the left end can be quickly moved to the right to compress the gas and create the pulse. Before the piston is moved, the gas is undisturbed and of uniform density as represented by the uniformly shaded region in Figure 17.1a. When the piston is pushed to the right (Fig. 17.1b), the gas just in front of it is compressed (as represented by the more heavily shaded region); the pressure and density in this region are now higher than they were before the piston moved. When the piston comes to rest (Fig. 17.1c), the compressed region of the gas continues to move to the right, corresponding to a longitudinal pulse traveling through the tube with speed v .

One can produce a one-dimensional *periodic* sound wave in the tube of gas in Figure 17.1 by causing the piston to move in simple harmonic motion. The results are shown in Figure 17.2. The darker parts of the colored areas in this figure represent regions in which the gas is compressed and the density and pressure are above their equilibrium values. A compressed region is formed whenever the pis-

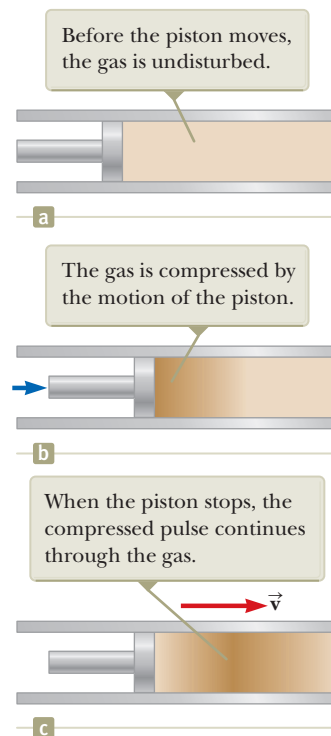


Figure 17.1 Motion of a longitudinal pulse through a compressible gas. The compression (darker region) is produced by the moving piston.

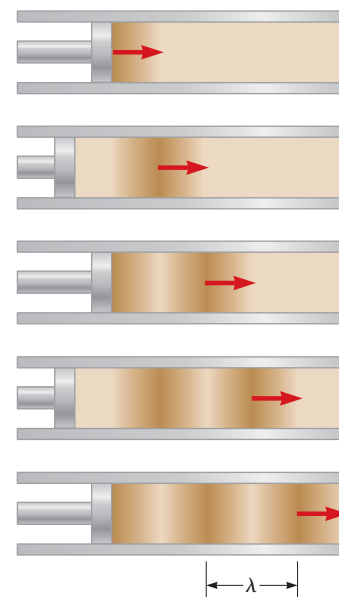


Figure 17.2 A longitudinal wave propagating through a gas-filled tube. The source of the wave is an oscillating piston at the left.

ton is pushed into the tube. This compressed region, called a **compression**, moves through the tube, continuously compressing the region just in front of itself. When the piston is pulled back, the gas in front of it expands and the pressure and density in this region fall below their equilibrium values (represented by the lighter parts of the colored areas in Fig. 17.2). These low-pressure regions, called **rarefactions**, also propagate along the tube, following the compressions. Both regions move at the speed of sound in the medium.

As the piston oscillates sinusoidally, regions of compression and rarefaction are continuously set up. The distance between two successive compressions (or two successive rarefactions) equals the wavelength λ of the sound wave. Because the sound wave is longitudinal, as the compressions and rarefactions travel through the tube, any small element of the gas moves with simple harmonic motion parallel to the direction of the wave. If $s(x, t)$ is the position of a small element relative to its equilibrium position,¹ we can express this harmonic position function as

$$s(x, t) = s_{\max} \cos(kx - \omega t) \quad (17.1)$$

where s_{\max} is the maximum position of the element relative to equilibrium. This parameter is often called the **displacement amplitude** of the wave. The parameter k is the wave number, and ω is the angular frequency of the wave. Notice that the displacement of the element is along x , in the direction of propagation of the sound wave.

The variation in the gas pressure ΔP measured from the equilibrium value is also periodic with the same wave number and angular frequency as for the displacement in Equation 17.1. Therefore, we can write

$$\Delta P = \Delta P_{\max} \sin(kx - \omega t) \quad (17.2)$$

where **the pressure amplitude** ΔP_{\max} is the maximum change in pressure from the equilibrium value.

Notice that we have expressed the displacement by means of a cosine function and the pressure by means of a sine function. We will justify this choice in the procedure that follows and relate the pressure amplitude P_{\max} to the displacement amplitude s_{\max} . Consider the piston–tube arrangement of Figure 17.1 once again. In Figure 17.3a, we focus our attention on a small cylindrical element of undisturbed gas of length Δx and area A . The volume of this element is $V_i = A \Delta x$.

Figure 17.3b shows this element of gas after a sound wave has moved it to a new position. The cylinder's two flat faces move through different distances s_1 and s_2 . The change in volume ΔV of the element in the new position is equal to $A \Delta s$, where $\Delta s = s_1 - s_2$.

From the definition of bulk modulus (see Eq. 12.8), we express the pressure variation in the element of gas as a function of its change in volume:

$$\Delta P = -B \frac{\Delta V}{V_i}$$

Let's substitute for the initial volume and the change in volume of the element:

$$\Delta P = -B \frac{A \Delta s}{A \Delta x}$$

Let the length Δx of the cylinder approach zero so that the ratio $\Delta s/\Delta x$ becomes a partial derivative:

$$\Delta P = -B \frac{\partial s}{\partial x} \quad (17.3)$$

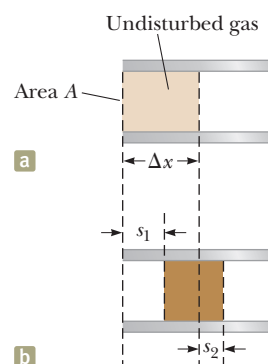


Figure 17.3 (a) An undisturbed element of gas of length Δx in a tube of cross-sectional area A . (b) When a sound wave propagates through the gas, the element is moved to a new position and has a different length. The parameters s_1 and s_2 describe the displacements of the ends of the element from their equilibrium positions.

¹We use $s(x, t)$ here instead of $y(x, t)$ because the displacement of elements of the medium is not perpendicular to the x direction.

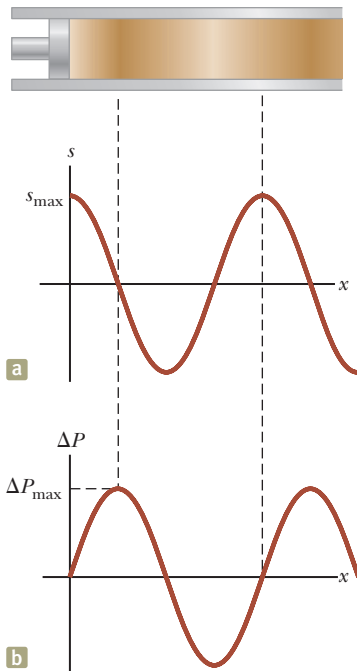


Figure 17.4 (a) Displacement amplitude and (b) pressure amplitude versus position for a sinusoidal longitudinal wave.

Substitute the position function given by Equation 17.1:

$$\Delta P = -B \frac{\partial}{\partial x} [s_{\max} \cos(kx - \omega t)] = Bs_{\max} k \sin(kx - \omega t)$$

From this result, we see that a displacement described by a cosine function leads to a pressure described by a sine function. We also see that the displacement and pressure amplitudes are related by

$$\Delta P_{\max} = Bs_{\max} k \quad (17.4)$$

This relationship depends on the bulk modulus of the gas, which is not as readily available as is the density of the gas. Once we determine the speed of sound in a gas in Section 17.2, we will be able to provide an expression that relates ΔP_{\max} and s_{\max} in terms of the density of the gas.

This discussion shows that a sound wave may be described equally well in terms of either pressure or displacement. A comparison of Equations 17.1 and 17.2 shows that the pressure wave is 90° out of phase with the displacement wave. Graphs of these functions are shown in Figure 17.4. The pressure variation is a maximum when the displacement from equilibrium is zero, and the displacement from equilibrium is a maximum when the pressure variation is zero.

Quick Quiz 17.1 If you blow across the top of an empty soft-drink bottle, a pulse of sound travels down through the air in the bottle. At the moment the pulse reaches the bottom of the bottle, what is the correct description of the displacement of elements of air from their equilibrium positions and the pressure of the air at this point? **(a)** The displacement and pressure are both at a maximum. **(b)** The displacement and pressure are both at a minimum. **(c)** The displacement is zero, and the pressure is a maximum. **(d)** The displacement is zero, and the pressure is a minimum.

17.2 Speed of Sound Waves

We now extend the discussion begun in Section 17.1 to evaluate the speed of sound in a gas. In Figure 17.5a, consider the cylindrical element of gas between the piston and the dashed line. This element of gas is in equilibrium under the influence of forces of equal magnitude, from the piston on the left and from the rest of the gas on the right. The magnitude of these forces is PA , where P is the pressure in the gas and A is the cross-sectional area of the tube.

Figure 17.5b shows the situation after a time interval Δt during which the piston moves to the right at a constant speed v_x due to a force from the left on the piston that has increased in magnitude to $(P + \Delta P)A$. By the end of the time interval Δt ,

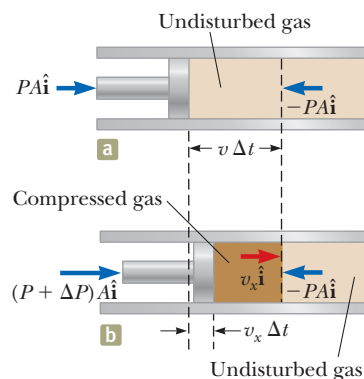


Figure 17.5 (a) An undisturbed element of gas of length $v \Delta t$ in a tube of cross-sectional area A . The element is in equilibrium between forces on either end. (b) When the piston moves inward at constant velocity v_x due to an increased force on the left, the element also moves with the same velocity.

every bit of gas in the element is moving with speed v_x . That will not be true in general for a macroscopic element of gas, but it will become true if we shrink the length of the element to an infinitesimal value.

The length of the undisturbed element of gas is chosen to be $v \Delta t$, where v is the speed of sound in the gas and Δt is the time interval between the configurations in Figures 17.5a and 17.5b. Therefore, at the end of the time interval Δt , the sound wave will just reach the right end of the cylindrical element of gas. The gas to the right of the element is undisturbed because the sound wave has not reached it yet.

The element of gas is modeled as a nonisolated system in terms of momentum. The force from the piston has provided an impulse to the element, which in turn exhibits a change in momentum. Therefore, we evaluate both sides of the impulse–momentum theorem:

$$\Delta \vec{p} = \vec{I} \quad (17.5)$$

On the right, the impulse is provided by the constant force due to the increased pressure on the piston:

$$\vec{I} = \sum \vec{F} \Delta t = (A \Delta P \Delta t) \hat{i}$$

The pressure change ΔP can be related to the volume change and then to the speeds v and v_x through the bulk modulus:

$$\Delta P = -B \frac{\Delta V}{V_i} = -B \frac{(-v_x A \Delta t)}{v A \Delta t} = B \frac{v_x}{v}$$

Therefore, the impulse becomes

$$\vec{I} = \left(AB \frac{v_x}{v} \Delta t \right) \hat{i} \quad (17.6)$$

On the left-hand side of the impulse–momentum theorem, Equation 17.5, the change in momentum of the element of gas of mass m is as follows:

$$\Delta \vec{p} = m \Delta \vec{v} = (\rho V_i)(v_x \hat{i} - 0) = (\rho v v_x A \Delta t) \hat{i} \quad (17.7)$$

Substituting Equations 17.6 and 17.7 into Equation 17.5, we find

$$\rho v v_x A \Delta t = AB \frac{v_x}{v} \Delta t$$

which reduces to an expression for the speed of sound in a gas:

$$v = \sqrt{\frac{B}{\rho}} \quad (17.8)$$

It is interesting to compare this expression with Equation 16.18 for the speed of transverse waves on a string, $v = \sqrt{T/\mu}$. In both cases, the wave speed depends on an elastic property of the medium (bulk modulus B or string tension T) and on an inertial property of the medium (volume density ρ or linear density μ). In fact, the speed of all mechanical waves follows an expression of the general form

$$v = \sqrt{\frac{\text{elastic property}}{\text{inertial property}}}$$

For longitudinal sound waves in a solid rod of material, for example, the speed of sound depends on Young's modulus Y and the density ρ . Table 17.1 (page 512) provides the speed of sound in several different materials.

The speed of sound also depends on the temperature of the medium. For sound traveling through air, the relationship between wave speed and air temperature is

$$v = 331 \sqrt{1 + \frac{T_C}{273}} \quad (17.9)$$

Table 17.1 Speed of Sound in Various Media

Medium	v (m/s)	Medium	v (m/s)	Medium	v (m/s)
Gases		Liquids at 25°C		Solids^a	
Hydrogen (0°C)	1 286	Glycerol	1 904	Pyrex glass	5 640
Helium (0°C)	972	Seawater	1 533	Iron	5 950
Air (20°C)	343	Water	1 493	Aluminum	6 420
Air (0°C)	331	Mercury	1 450	Brass	4 700
Oxygen (0°C)	317	Kerosene	1 324	Copper	5 010
		Methyl alcohol	1 143	Gold	3 240
		Carbon tetrachloride	926	Lucite	2 680
				Lead	1 960
				Rubber	1 600

^aValues given are for propagation of longitudinal waves in bulk media. Speeds for longitudinal waves in thin rods are smaller, and speeds of transverse waves in bulk are smaller yet.

where v is in meters/second, 331 m/s is the speed of sound in air at 0°C, and T_C is the air temperature in degrees Celsius. Using this equation, one finds that at 20°C, the speed of sound in air is approximately 343 m/s.

This information provides a convenient way to estimate the distance to a thunderstorm. First count the number of seconds between seeing the flash of lightning and hearing the thunder. Dividing this time interval by 3 gives the approximate distance to the lightning in kilometers because 343 m/s is approximately $\frac{1}{3}$ km/s. Dividing the time interval in seconds by 5 gives the approximate distance to the lightning in miles because the speed of sound is approximately $\frac{1}{5}$ mi/s.

Having an expression (Eq. 17.8) for the speed of sound, we can now express the relationship between pressure amplitude and displacement amplitude for a sound wave (Eq. 17.4) as

$$\Delta P_{\max} = B_{s_{\max}} k = (\rho v^2) s_{\max} \left(\frac{\omega}{v} \right) = \rho v \omega s_{\max} \quad (17.10)$$

This expression is a bit more useful than Equation 17.4 because the density of a gas is more readily available than is the bulk modulus.

17.3 Intensity of Periodic Sound Waves

In Chapter 16, we showed that a wave traveling on a taut string transports energy, consistent with the notion of energy transfer by mechanical waves in Equation 8.2. Naturally, we would expect sound waves to also represent a transfer of energy. Consider the element of gas acted on by the piston in Figure 17.5. Imagine that the piston is moving back and forth in simple harmonic motion at angular frequency ω . Imagine also that the length of the element becomes very small so that the entire element moves with the same velocity as the piston. Then we can model the element as a particle on which the piston is doing work. The rate at which the piston is doing work on the element at any instant of time is given by Equation 8.19:

$$Power = \vec{\mathbf{F}} \cdot \vec{\mathbf{v}}_x$$

where we have used *Power* rather than P so that we don't confuse power P with pressure P ! The force $\vec{\mathbf{F}}$ on the element of gas is related to the pressure and the velocity $\vec{\mathbf{v}}_x$ of the element is the derivative of the displacement function, so we find

$$\begin{aligned} Power &= [\Delta P(x, t)A] \hat{\mathbf{i}} \cdot \frac{\partial}{\partial t} [s(x, t) \hat{\mathbf{i}}] \\ &= [\rho v \omega A s_{\max} \sin(kx - \omega t)] \left\{ \frac{\partial}{\partial t} [s_{\max} \cos(kx - \omega t)] \right\} \end{aligned}$$

$$\begin{aligned}
 &= \rho v \omega A s_{\max} \sin(kx - \omega t) [\omega s_{\max} \sin(kx - \omega t)] \\
 &= \rho v \omega^2 A s_{\max}^2 \sin^2(kx - \omega t)
 \end{aligned}$$

We now find the time average power over one period of the oscillation. For any given value of x , which we can choose to be $x = 0$, the average value of $\sin^2(kx - \omega t)$ over one period T is

$$\frac{1}{T} \int_0^T \sin^2(0 - \omega t) dt = \frac{1}{T} \int_0^T \sin^2 \omega t dt = \frac{1}{T} \left(\frac{t}{2} + \frac{\sin 2\omega t}{2\omega} \right) \Big|_0^T = \frac{1}{2}$$

Therefore,

$$(Power)_{\text{avg}} = \frac{1}{2} \rho v \omega^2 A s_{\max}^2$$

We define the **intensity** I of a wave, or the power per unit area, as the rate at which the energy transported by the wave transfers through a unit area A perpendicular to the direction of travel of the wave:

$$I \equiv \frac{(Power)_{\text{avg}}}{A} \quad (17.11)$$

◀ Intensity of a sound wave

In this case, the intensity is therefore

$$I = \frac{1}{2} \rho v (\omega s_{\max})^2$$

Hence, the intensity of a periodic sound wave is proportional to the square of the displacement amplitude and to the square of the angular frequency. This expression can also be written in terms of the pressure amplitude ΔP_{\max} ; in this case, we use Equation 17.10 to obtain

$$I = \frac{(\Delta P_{\max})^2}{2\rho v} \quad (17.12)$$

The string waves we studied in Chapter 16 are constrained to move along the one-dimensional string, as discussed in the introduction to this chapter. The sound waves we have studied with regard to Figures 17.1 through 17.3 and 17.5 are constrained to move in one dimension along the length of the tube. As we mentioned in the introduction, however, sound waves can move through three-dimensional bulk media, so let's place a sound source in the open air and study the results.

Consider the special case of a point source emitting sound waves equally in all directions. If the air around the source is perfectly uniform, the sound power radiated in all directions is the same, and the speed of sound in all directions is the same. The result in this situation is called a **spherical wave**. Figure 17.6 shows these spherical waves as a series of circular arcs concentric with the source. Each arc represents a surface over which the phase of the wave is constant. We call such a surface of constant phase a **wave front**. The radial distance between adjacent wave fronts that have the same phase is the wavelength λ of the wave. The radial lines pointing outward from the source, representing the direction of propagation of the waves, are called **rays**.

The average power emitted by the source must be distributed uniformly over each spherical wave front of area $4\pi r^2$. Hence, the wave intensity at a distance r from the source is

$$I = \frac{(Power)_{\text{avg}}}{A} = \frac{(Power)_{\text{avg}}}{4\pi r^2} \quad (17.13)$$

The intensity decreases as the square of the distance from the source. This inverse-square law is reminiscent of the behavior of gravity in Chapter 13.

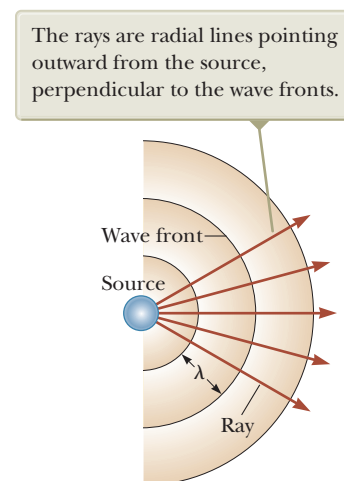


Figure 17.6 Spherical waves emitted by a point source. The circular arcs represent the spherical wave fronts that are concentric with the source.

- Quick Quiz 17.2** A vibrating guitar string makes very little sound if it is not mounted on the guitar body. Why does the sound have greater intensity if the string is attached to the guitar body? (a) The string vibrates with more energy. (b) The energy leaves the guitar at a greater rate. (c) The sound power is spread over a larger area at the listener's position. (d) The sound power is concentrated over a smaller area at the listener's position. (e) The speed of sound is higher in the material of the guitar body. (f) None of these answers is correct.

Example 17.1 Hearing Limits

The faintest sounds the human ear can detect at a frequency of 1 000 Hz correspond to an intensity of about $1.00 \times 10^{-12} \text{ W/m}^2$, which is called *threshold of hearing*. The loudest sounds the ear can tolerate at this frequency correspond to an intensity of about 1.00 W/m^2 , the *threshold of pain*. Determine the pressure amplitude and displacement amplitude associated with these two limits.

SOLUTION

Conceptualize Think about the quietest environment you have ever experienced. It is likely that the intensity of sound in even this quietest environment is higher than the threshold of hearing.

Categorize Because we are given intensities and asked to calculate pressure and displacement amplitudes, this problem is an analysis problem requiring the concepts discussed in this section.

Analyze To find the amplitude of the pressure variation at the threshold of hearing, use Equation 17.12, taking the speed of sound waves in air to be $v = 343 \text{ m/s}$ and the density of air to be $\rho = 1.20 \text{ kg/m}^3$:

$$\begin{aligned}\Delta P_{\max} &= \sqrt{2\rho v I} \\ &= \sqrt{2(1.20 \text{ kg/m}^3)(343 \text{ m/s})(1.00 \times 10^{-12} \text{ W/m}^2)} \\ &= 2.87 \times 10^{-5} \text{ N/m}^2\end{aligned}$$

Calculate the corresponding displacement amplitude using Equation 17.10, recalling that $\omega = 2\pi f$ (Eq. 16.9):

$$\begin{aligned}s_{\max} &= \frac{\Delta P_{\max}}{\rho v \omega} = \frac{2.87 \times 10^{-5} \text{ N/m}^2}{(1.20 \text{ kg/m}^3)(343 \text{ m/s})(2\pi \times 1000 \text{ Hz})} \\ &= 1.11 \times 10^{-11} \text{ m}\end{aligned}$$

In a similar manner, one finds that the loudest sounds the human ear can tolerate (the threshold of pain) correspond to a pressure amplitude of 28.7 N/m^2 and a displacement amplitude equal to $1.11 \times 10^{-5} \text{ m}$.

Finalize Because atmospheric pressure is about 10^5 N/m^2 , the result for the pressure amplitude tells us that the ear is sensitive to pressure fluctuations as small as 3 parts in 10^{10} ! The displacement amplitude is also a remarkably small number! If we compare this result for s_{\max} to the size of an atom (about 10^{-10} m), we see that the ear is an extremely sensitive detector of sound waves.

Example 17.2 Intensity Variations of a Point Source

A point source emits sound waves with an average power output of 80.0 W.

(A) Find the intensity 3.00 m from the source.

SOLUTION

Conceptualize Imagine a small loudspeaker sending sound out at an average rate of 80.0 W uniformly in all directions. You are standing 3.00 m away from the speakers. As the sound propagates, the energy of the sound waves is spread out over an ever-expanding sphere, so the intensity of the sound falls off with distance.

Categorize We evaluate the intensity from an equation generated in this section, so we categorize this example as a substitution problem.

17.2 continued

Because a point source emits energy in the form of spherical waves, use Equation 17.13 to find the intensity:

$$I = \frac{(Power)_{avg}}{4\pi r^2} = \frac{80.0 \text{ W}}{4\pi(3.00 \text{ m})^2} = 0.707 \text{ W/m}^2$$

This intensity is close to the threshold of pain.

(B) Find the distance at which the intensity of the sound is $1.00 \times 10^{-8} \text{ W/m}^2$.

SOLUTION

Solve for r in Equation 17.13 and use the given value for I :

$$\begin{aligned} r &= \sqrt{\frac{(Power)_{avg}}{4\pi I}} = \sqrt{\frac{80.0 \text{ W}}{4\pi(1.00 \times 10^{-8} \text{ W/m}^2)}} \\ &= 2.52 \times 10^4 \text{ m} \end{aligned}$$

Sound Level in Decibels

Example 17.1 illustrates the wide range of intensities the human ear can detect. Because this range is so wide, it is convenient to use a logarithmic scale, where the **sound level** β (Greek letter beta) is defined by the equation

$$\beta \equiv 10 \log \left(\frac{I}{I_0} \right) \quad (17.14)$$

The constant I_0 is the *reference intensity*, taken to be at the threshold of hearing ($I_0 = 1.00 \times 10^{-12} \text{ W/m}^2$), and I is the intensity in watts per square meter to which the sound level β corresponds, where β is measured² in **decibels** (dB). On this scale, the threshold of pain ($I = 1.00 \text{ W/m}^2$) corresponds to a sound level of $\beta = 10 \log [(1 \text{ W/m}^2)/(10^{-12} \text{ W/m}^2)] = 10 \log (10^{12}) = 120 \text{ dB}$, and the threshold of hearing corresponds to $\beta = 10 \log [(10^{-12} \text{ W/m}^2)/(10^{-12} \text{ W/m}^2)] = 0 \text{ dB}$.

Prolonged exposure to high sound levels may seriously damage the human ear. Ear plugs are recommended whenever sound levels exceed 90 dB. Recent evidence suggests that “noise pollution” may be a contributing factor to high blood pressure, anxiety, and nervousness. Table 17.2 gives some typical sound levels.

Quick Quiz 17.3 Increasing the intensity of a sound by a factor of 100 causes the sound level to increase by what amount? (a) 100 dB (b) 20 dB (c) 10 dB (d) 2 dB

Example 17.3 Sound Levels

Two identical machines are positioned the same distance from a worker. The intensity of sound delivered by each operating machine at the worker’s location is $2.0 \times 10^{-7} \text{ W/m}^2$.

(A) Find the sound level heard by the worker when one machine is operating.

SOLUTION

Conceptualize Imagine a situation in which one source of sound is active and is then joined by a second identical source, such as one person speaking and then a second person speaking at the same time or one musical instrument playing and then being joined by a second instrument.

Categorize This example is a relatively simple analysis problem requiring Equation 17.14.

continued

Table 17.2

Source of Sound	β (dB)
Nearby jet airplane	150
Jackhammer; machine gun	130
Siren; rock concert	120
Subway; power lawn mower	100
Busy traffic	80
Vacuum cleaner	70
Normal conversation	60
Mosquito buzzing	40
Whisper	30
Rustling leaves	10
Threshold of hearing	0

²The unit *bel* is named after the inventor of the telephone, Alexander Graham Bell (1847–1922). The prefix *deci-* is the SI prefix that stands for 10^{-1} .

17.3 continued

Analyze Use Equation 17.14 to calculate the sound level at the worker's location with one machine operating:

$$\beta_1 = 10 \log \left(\frac{2.0 \times 10^{-7} \text{ W/m}^2}{1.00 \times 10^{-12} \text{ W/m}^2} \right) = 10 \log (2.0 \times 10^5) = 53 \text{ dB}$$

(B) Find the sound level heard by the worker when two machines are operating.

SOLUTION

Use Equation 17.14 to calculate the sound level at the worker's location with double the intensity:

$$\beta_2 = 10 \log \left(\frac{4.0 \times 10^{-7} \text{ W/m}^2}{1.00 \times 10^{-12} \text{ W/m}^2} \right) = 10 \log (4.0 \times 10^5) = 56 \text{ dB}$$

Finalize These results show that when the intensity is doubled, the sound level increases by only 3 dB. This 3-dB increase is independent of the original sound level. (Prove this to yourself!)

WHAT IF? *Loudness* is a psychological response to a sound. It depends on both the intensity and the frequency of the sound. As a rule of thumb, a doubling in loudness is approximately associated with an increase in sound level of 10 dB. (This rule of thumb is relatively inaccurate at very low or very high frequencies.) If the loudness of the machines in this example is to be doubled, how many machines at the same distance from the worker must be running?

Answer Using the rule of thumb, a doubling of loudness corresponds to a sound level increase of 10 dB. Therefore,

$$\begin{aligned} \beta_2 - \beta_1 = 10 \text{ dB} &= 10 \log \left(\frac{I_2}{I_0} \right) - 10 \log \left(\frac{I_1}{I_0} \right) = 10 \log \left(\frac{I_2}{I_1} \right) \\ \log \left(\frac{I_2}{I_1} \right) &= 1 \rightarrow I_2 = 10I_1 \end{aligned}$$

Therefore, ten machines must be operating to double the loudness.

Loudness and Frequency

The discussion of sound level in decibels relates to a *physical* measurement of the strength of a sound. Let us now extend our discussion from the What If? section of Example 17.3 concerning the *psychological* “measurement” of the strength of a sound.

Of course, we don't have instruments in our bodies that can display numerical values of our reactions to stimuli. We have to “calibrate” our reactions somehow by comparing different sounds to a reference sound, but that is not easy to accomplish. For example, earlier we mentioned that the threshold intensity is 10^{-12} W/m^2 , corresponding to an intensity level of 0 dB. In reality, this value is the threshold only for a sound of frequency 1 000 Hz, which is a standard reference frequency in acoustics. If we perform an experiment to measure the threshold intensity at other frequencies, we find a distinct variation of this threshold as a function of frequency. For example, at 100 Hz, a barely audible sound must have an intensity level of about 30 dB! Unfortunately, there is no simple relationship between physical measurements and psychological “measurements.” The 100-Hz, 30-dB sound is psychologically “equal” in loudness to the 1 000-Hz, 0-dB sound (both are just barely audible), but they are not physically equal in sound level (30 dB \neq 0 dB).

By using test subjects, the human response to sound has been studied, and the results are shown in the white area of Figure 17.7 along with the approximate frequency and sound-level ranges of other sound sources. The lower curve of the white area corresponds to the threshold of hearing. Its variation with frequency is clear from this diagram. Notice that humans are sensitive to frequencies ranging from about 20 Hz to about 20 000 Hz. The upper bound of the white area is the thresh-

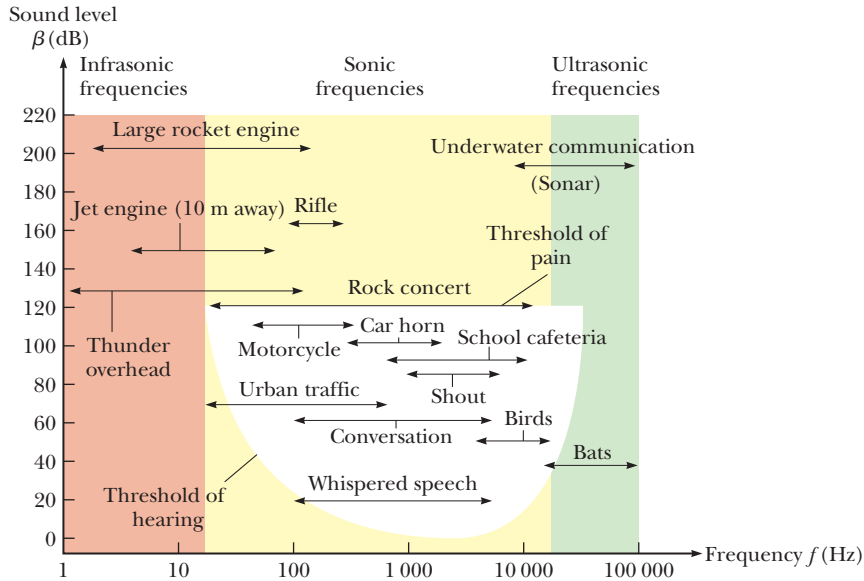


Figure 17.7 Approximate ranges of frequency and sound level of various sources and that of normal human hearing, shown by the white area. (From R. L. Reese, *University Physics*, Pacific Grove, Brooks/Cole, 2000.)

old of pain. Here the boundary of the white area appears straight because the psychological response is relatively independent of frequency at this high sound level.

The most dramatic change with frequency is in the lower left region of the white area, for low frequencies and low intensity levels. Our ears are particularly insensitive in this region. If you are listening to your home entertainment system and the bass (low frequencies) and treble (high frequencies) sound balanced at a high volume, try turning the volume down and listening again. You will probably notice that the bass seems weak, which is due to the insensitivity of the ear to low frequencies at low sound levels as shown in Figure 17.7.

17.4 The Doppler Effect

Perhaps you have noticed how the sound of a vehicle's horn changes as the vehicle moves past you. The frequency of the sound you hear as the vehicle approaches you is higher than the frequency you hear as it moves away from you. This experience is one example of the **Doppler effect**.³

To see what causes this apparent frequency change, imagine you are in a boat that is lying at anchor on a gentle sea where the waves have a period of $T = 3.0$ s. Hence, every 3.0 s a crest hits your boat. Figure 17.8a shows this situation, with the water waves moving toward the left. If you set your watch to $t = 0$ just as one crest hits, the watch reads 3.0 s when the next crest hits, 6.0 s when the third crest

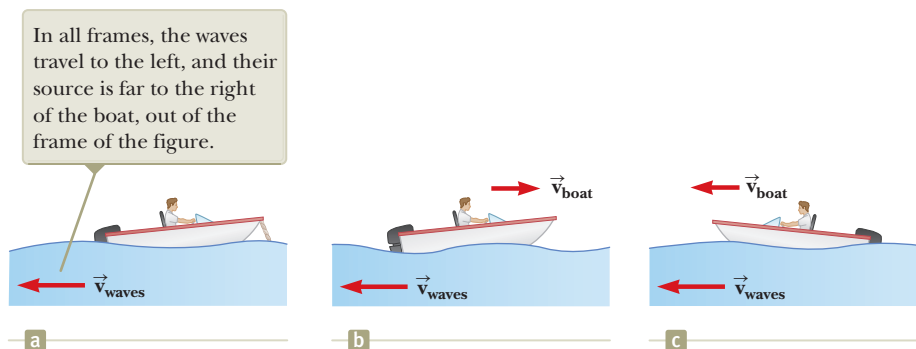


Figure 17.8 (a) Waves moving toward a stationary boat. (b) The boat moving toward the wave source. (c) The boat moving away from the wave source.

³Named after Austrian physicist Christian Johann Doppler (1803–1853), who in 1842 predicted the effect for both sound waves and light waves.

hits, and so on. From these observations, you conclude that the wave frequency is $f = 1/T = 1/(3.0 \text{ s}) = 0.33 \text{ Hz}$. Now suppose you start your motor and head directly into the oncoming waves as in Figure 17.8b. Again you set your watch to $t = 0$ as a crest hits the front (the bow) of your boat. Now, however, because you are moving toward the next wave crest as it moves toward you, it hits you less than 3.0 s after the first hit. In other words, the period you observe is shorter than the 3.0-s period you observed when you were stationary. Because $f = 1/T$, you observe a higher wave frequency than when you were at rest.

If you turn around and move in the same direction as the waves (Fig. 17.8c), you observe the opposite effect. You set your watch to $t = 0$ as a crest hits the back (the stern) of the boat. Because you are now moving away from the next crest, more than 3.0 s has elapsed on your watch by the time that crest catches you. Therefore, you observe a lower frequency than when you were at rest.

These effects occur because the *relative* speed between your boat and the waves (Fig. 17.8c), you observe the opposite effect. You set your watch to $t = 0$ as a crest hits the back (the stern) of the boat. Because you are now moving away from the next crest, more than 3.0 s has elapsed on your watch by the time that crest catches you. Therefore, you observe a lower frequency than when you were at rest.

These effects occur because the *relative* speed between your boat and the waves depends on the direction of travel and on the speed of your boat. (See Section 4.6.) When you are moving toward the right in Figure 17.8b, this relative speed is higher than that of the wave speed, which leads to the observation of an increased frequency. When you turn around and move to the left, the relative speed is lower, as is the observed frequency of the water waves.

Let's now examine an analogous situation with sound waves in which the water waves become sound waves, the water becomes the air, and the person on the boat becomes an observer listening to the sound. In this case, an observer O is moving and a sound source S is stationary. For simplicity, we assume the air is also stationary and the observer moves directly toward the source (Fig. 17.9). The observer moves with a speed v_o toward a stationary point source ($v_s = 0$), where *stationary* means at rest with respect to the medium, air.

If a point source emits sound waves and the medium is uniform, the waves move at the same speed in all directions radially away from the source; the result is a spherical wave as mentioned in Section 17.3. The distance between adjacent wave fronts equals the wavelength λ . In Figure 17.9, the circles are the intersections of these three-dimensional wave fronts with the two-dimensional paper.

We take the frequency of the source in Figure 17.9 to be f , the wavelength to be λ , and the speed of sound to be v . If the observer were also stationary, he would detect wave fronts at a frequency f . (That is, when $v_o = 0$ and $v_s = 0$, the observed frequency equals the source frequency.) When the observer moves toward the source, the speed of the waves relative to the observer is $v' = v + v_o$, as in the case of the boat in Figure 17.8, but the wavelength λ is unchanged. Hence, using Equation 16.12, $v = \lambda f$, we can say that the frequency f' heard by the observer is *increased* and is given by

$$f' = \frac{v'}{\lambda} = \frac{v + v_o}{\lambda}$$

Because $\lambda = v/f$, we can express f' as

$$f' = \left(\frac{v + v_o}{v} \right) f \quad (\text{observer moving toward source}) \quad (17.15)$$

If the observer is moving away from the source, the speed of the wave relative to the observer is $v' = v - v_o$. The frequency heard by the observer in this case is *decreased* and is given by

$$f' = \left(\frac{v - v_o}{v} \right) f \quad (\text{observer moving away from source}) \quad (17.16)$$

These last two equations can be reduced to a single equation by adopting a sign convention. Whenever an observer moves with a speed v_o relative to a stationary source, the frequency heard by the observer is given by Equation 17.15, with v_o interpreted as follows: a positive value is substituted for v_o when the observer moves




Figure 17.9 An observer O (the cyclist) moves with a speed v_o toward a stationary point source S , the horn of a parked truck. The observer hears a frequency f' that is greater than the source frequency.

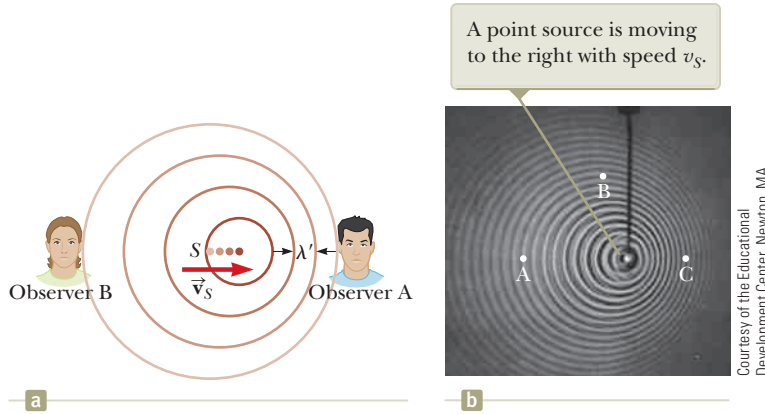


Figure 17.10 (a) A source S moving with a speed v_s toward a stationary observer A and away from a stationary observer B. Observer A hears an increased frequency, and observer B hears a decreased frequency. (b) The Doppler effect in water, observed in a ripple tank. Letters shown in the photo refer to Quick Quiz 17.4.

toward the source, and a negative value is substituted when the observer moves away from the source.

Now suppose the source is in motion and the observer is at rest. If the source moves directly toward observer A in Figure 17.10a, each new wave is emitted from a position to the right of the origin of the previous wave. As a result, the wave fronts heard by the observer are closer together than they would be if the source were not moving. (Fig. 17.10b shows this effect for waves moving on the surface of water.) As a result, the wavelength λ' measured by observer A is shorter than the wavelength λ of the source. During each vibration, which lasts for a time interval T (the period), the source moves a distance $v_s T = v_s/f$ and the wavelength is *shortened* by this amount. Therefore, the observed wavelength λ' is

$$\lambda' = \lambda - \Delta\lambda = \lambda - \frac{v_s}{f}$$

Because $\lambda = v/f$, the frequency f' heard by observer A is

$$f' = \frac{v}{\lambda'} = \frac{v}{\lambda - (v_s/f)} = \frac{v}{(v/f) - (v_s/f)}$$

$$f' = \left(\frac{v}{v - v_s} \right) f \quad (\text{source moving toward observer}) \quad (17.17)$$

That is, the observed frequency is *increased* whenever the source is moving toward the observer.

When the source moves away from a stationary observer, as is the case for observer B in Figure 17.10a, the observer measures a wavelength λ' that is *greater* than λ and hears a *decreased* frequency:

$$f' = \left(\frac{v}{v + v_s} \right) f \quad (\text{source moving away from observer}) \quad (17.18)$$

We can express the general relationship for the observed frequency when a source is moving and an observer is at rest as Equation 17.17, with the same sign convention applied to v_s as was applied to v_o : a positive value is substituted for v_s when the source moves toward the observer, and a negative value is substituted when the source moves away from the observer.

Finally, combining Equations 17.15 and 17.17 gives the following general relationship for the observed frequency that includes all four conditions described by Equations 17.15 through 17.18:

$$f' = \left(\frac{v + v_o}{v - v_s} \right) f \quad (17.19)$$

Pitfall Prevention 17.1

Doppler Effect Does Not Depend on Distance Some people think that the Doppler effect depends on the distance between the source and the observer. Although the *intensity* of a sound varies as the distance changes, the apparent *frequency* depends only on the relative speed of source and observer. As you listen to an approaching source, you will detect increasing intensity but constant frequency. As the source passes, you will hear the frequency suddenly drop to a new constant value and the intensity begin to decrease.

◀ General Doppler-shift expression

In this expression, the signs for the values substituted for v_o and v_s depend on the direction of the velocity. A positive value is used for motion of the observer or the source *toward* the other (associated with an *increase* in observed frequency), and a negative value is used for motion of one *away from* the other (associated with a *decrease* in observed frequency).

Although the Doppler effect is most typically experienced with sound waves, it is a phenomenon common to all waves. For example, the relative motion of source and observer produces a frequency shift in light waves. The Doppler effect is used in police radar systems to measure the speeds of motor vehicles. Likewise, astronomers use the effect to determine the speeds of stars, galaxies, and other celestial objects relative to the Earth.

Quick Quiz 17.4 Consider detectors of water waves at three locations A, B, and C in Figure 17.10b. Which of the following statements is true? (a) The wave speed is highest at location A. (b) The wave speed is highest at location C. (c) The detected wavelength is largest at location B. (d) The detected wavelength is largest at location C. (e) The detected frequency is highest at location C. (f) The detected frequency is highest at location A.

Quick Quiz 17.5 You stand on a platform at a train station and listen to a train approaching the station at a constant velocity. While the train approaches, but before it arrives, what do you hear? (a) the intensity and the frequency of the sound both increasing (b) the intensity and the frequency of the sound both decreasing (c) the intensity increasing and the frequency decreasing (d) the intensity decreasing and the frequency increasing (e) the intensity increasing and the frequency remaining the same (f) the intensity decreasing and the frequency remaining the same

Example 17.4 The Broken Clock Radio AM

Your clock radio awakens you with a steady and irritating sound of frequency 600 Hz. One morning, it malfunctions and cannot be turned off. In frustration, you drop the clock radio out of your fourth-story dorm window, 15.0 m from the ground. Assume the speed of sound is 343 m/s. As you listen to the falling clock radio, what frequency do you hear just before you hear it striking the ground?

SOLUTION

Conceptualize The speed of the clock radio increases as it falls. Therefore, it is a source of sound moving away from you with an increasing speed so the frequency you hear should be less than 600 Hz.

Categorize We categorize this problem as one in which we combine the *particle under constant acceleration* model for the falling radio with our understanding of the frequency shift of sound due to the Doppler effect.

Analyze Because the clock radio is modeled as a particle under constant acceleration due to gravity, use Equation 2.13 to express the speed of the source of sound:

$$(1) \quad v_s = v_{yi} + a_y t = 0 - gt = -gt$$

From Equation 2.16, find the time at which the clock radio strikes the ground:

$$y_f = y_i + v_{yi}t - \frac{1}{2}gt^2 = 0 + 0 - \frac{1}{2}gt^2 \rightarrow t = \sqrt{-\frac{2y_f}{g}}$$

Substitute into Equation (1):

$$v_s = (-g)\sqrt{-\frac{2y_f}{g}} = -\sqrt{-2gy_f}$$

Use Equation 17.19 to determine the Doppler-shifted frequency heard from the falling clock radio:

$$f' = \left[\frac{v + 0}{v - (-\sqrt{-2gy_f})} \right] f = \left(\frac{v}{v + \sqrt{-2gy_f}} \right) f$$

17.4 continued

Substitute numerical values:

$$f' = \left[\frac{343 \text{ m/s}}{343 \text{ m/s} + \sqrt{-2(9.80 \text{ m/s}^2)(-15.0 \text{ m})}} \right] (600 \text{ Hz})$$

$$= 571 \text{ Hz}$$

Finalize The frequency is lower than the actual frequency of 600 Hz because the clock radio is moving away from you. If it were to fall from a higher floor so that it passes below $y = -15.0 \text{ m}$, the clock radio would continue to accelerate and the frequency would continue to drop.

Example 17.5 Doppler Submarines

A submarine (sub A) travels through water at a speed of 8.00 m/s, emitting a sonar wave at a frequency of 1 400 Hz. The speed of sound in the water is 1 533 m/s. A second submarine (sub B) is located such that both submarines are traveling directly toward each other. The second submarine is moving at 9.00 m/s.

(A) What frequency is detected by an observer riding on sub B as the subs approach each other?

SOLUTION

Conceptualize Even though the problem involves subs moving in water, there is a Doppler effect just like there is when you are in a moving car and listening to a sound moving through the air from another car.

Categorize Because both subs are moving, we categorize this problem as one involving the Doppler effect for both a moving source and a moving observer.

Analyze Use Equation 17.19 to find the Doppler-shifted frequency heard by the observer in sub B, being careful with the signs assigned to the source and observer speeds:

$$f' = \left(\frac{v + v_o}{v - v_s} \right) f$$

$$f' = \left[\frac{1\,533 \text{ m/s} + (+9.00 \text{ m/s})}{1\,533 \text{ m/s} - (+8.00 \text{ m/s})} \right] (1\,400 \text{ Hz}) = 1\,416 \text{ Hz}$$

(B) The subs barely miss each other and pass. What frequency is detected by an observer riding on sub B as the subs recede from each other?

SOLUTION

Use Equation 17.19 to find the Doppler-shifted frequency heard by the observer in sub B, again being careful with the signs assigned to the source and observer speeds:

$$f' = \left(\frac{v + v_o}{v - v_s} \right) f$$

$$f' = \left[\frac{1\,533 \text{ m/s} + (-9.00 \text{ m/s})}{1\,533 \text{ m/s} - (-8.00 \text{ m/s})} \right] (1\,400 \text{ Hz}) = 1\,385 \text{ Hz}$$

Notice that the frequency drops from 1 416 Hz to 1 385 Hz as the subs pass. This effect is similar to the drop in frequency you hear when a car passes by you while blowing its horn.

(C) While the subs are approaching each other, some of the sound from sub A reflects from sub B and returns to sub A. If this sound were to be detected by an observer on sub A, what is its frequency?

SOLUTION

The sound of apparent frequency 1 416 Hz found in part (A) is reflected from a moving source (sub B) and then detected by a moving observer (sub A). Find the frequency detected by sub A:

$$f'' = \left(\frac{v + v_o}{v - v_s} \right) f'$$

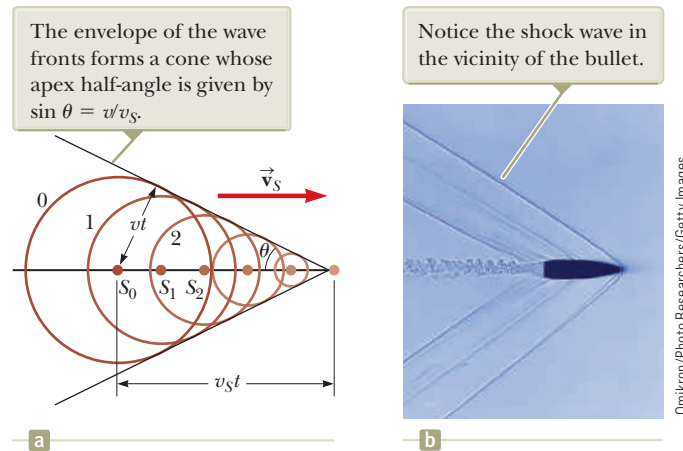
$$= \left[\frac{1\,533 \text{ m/s} + (+8.00 \text{ m/s})}{1\,533 \text{ m/s} - (+9.00 \text{ m/s})} \right] (1\,416 \text{ Hz}) = 1\,432 \text{ Hz}$$

continued

17.5 continued

Finalize This technique is used by police officers to measure the speed of a moving car. Microwaves are emitted from the police car and reflected by the moving car. By detecting the Doppler-shifted frequency of the reflected microwaves, the police officer can determine the speed of the moving car.

Figure 17.11 (a) A representation of a shock wave produced when a source moves from S_0 to the right with a speed v_s that is greater than the wave speed v in the medium. (b) A stroboscopic photograph of a bullet moving at supersonic speed through the hot air above a candle.




Shock Waves

Now consider what happens when the speed v_s of a source *exceeds* the wave speed v . This situation is depicted graphically in Figure 17.11a. The circles represent spherical wave fronts emitted by the source at various times during its motion. At $t = 0$, the source is at S_0 and moving toward the right. At later times, the source is at S_1 , and then S_2 , and so on. At the time t , the wave front centered at S_0 reaches a radius of vt . In this same time interval, the source travels a distance $v_s t$. Notice in Figure 17.11a that a straight line can be drawn tangent to all the wave fronts generated at various times. Therefore, the envelope of these wave fronts is a cone whose apex half-angle θ (the “Mach angle”) is given by

$$\sin \theta = \frac{vt}{v_s t} = \frac{v}{v_s}$$

The ratio v_s/v is referred to as the *Mach number*, and the conical wave front produced when $v_s > v$ (supersonic speeds) is known as a *shock wave*. An interesting analogy to shock waves is the V-shaped wave fronts produced by a boat (the bow wave) when the boat’s speed exceeds the speed of the surface-water waves (Fig. 17.12).

Jet airplanes traveling at supersonic speeds produce shock waves, which are responsible for the loud “sonic boom” one hears. The shock wave carries a great deal of energy concentrated on the surface of the cone, with correspondingly great pressure variations. Such shock waves are unpleasant to hear and can cause damage to buildings when aircraft fly supersonically at low altitudes. In fact, an airplane flying at supersonic speeds produces a double boom because two shock waves are formed, one from the nose of the plane and one from the tail. People near the path of a space shuttle as it glides toward its landing point have reported hearing what sounds like two very closely spaced cracks of thunder.



Robert Holland/Stone/Getty Images

Figure 17.12 The V-shaped bow wave of a boat is formed because the boat speed is greater than the speed of the water waves it generates. A bow wave is analogous to a shock wave formed by an airplane traveling faster than sound.

- Quick Quiz 17.6** An airplane flying with a constant velocity moves from a cold air mass into a warm air mass. Does the Mach number (a) increase, (b) decrease, or (c) stay the same?

Summary

Definitions

The **intensity** of a periodic sound wave, which is the power per unit area, is

$$I \equiv \frac{(\text{Power})_{\text{avg}}}{A} = \frac{(\Delta P_{\text{max}})^2}{2\rho v} \quad (17.11, 17.12)$$

The **sound level** of a sound wave in decibels is

$$\beta \equiv 10 \log \left(\frac{I}{I_0} \right) \quad (17.14)$$

The constant I_0 is a reference intensity, usually taken to be at the threshold of hearing ($1.00 \times 10^{-12} \text{ W/m}^2$), and I is the intensity of the sound wave in watts per square meter.

Concepts and Principles

Sound waves are longitudinal and travel through a compressible medium with a speed that depends on the elastic and inertial properties of that medium. The speed of sound in a gas having a bulk modulus B and density ρ is

$$v = \sqrt{\frac{B}{\rho}} \quad (17.8)$$

For sinusoidal sound waves, the variation in the position of an element of the medium is

$$s(x, t) = s_{\text{max}} \cos(kx - \omega t) \quad (17.1)$$

and the variation in pressure from the equilibrium value is

$$\Delta P = \Delta P_{\text{max}} \sin(kx - \omega t) \quad (17.2)$$

where ΔP_{max} is the **pressure amplitude**. The pressure wave is 90° out of phase with the displacement wave. The relationship between s_{max} and ΔP_{max} is

$$\Delta P_{\text{max}} = \rho v \omega s_{\text{max}} \quad (17.10)$$

The change in frequency heard by an observer whenever there is relative motion between a source of sound waves and the observer is called the **Doppler effect**. The observed frequency is

$$f' = \left(\frac{v + v_o}{v - v_s} \right) f \quad (17.19)$$

In this expression, the signs for the values substituted for v_o and v_s depend on the direction of the velocity. A positive value for the speed of the observer or source is substituted if the velocity of one is toward the other, whereas a negative value represents a velocity of one away from the other.

Objective Questions

1. denotes answer available in *Student Solutions Manual/Study Guide*

- Table 17.1 shows the speed of sound is typically an order of magnitude larger in solids than in gases. To what can this higher value be most directly attributed? (a) the difference in density between solids and gases (b) the difference in compressibility between solids and gases (c) the limited size of a solid object compared to a free gas (d) the impossibility of holding a gas under significant tension
- Two sirens A and B are sounding so that the frequency from A is twice the frequency from B. Compared with the speed of sound from A, is the speed of sound from B (a) twice as fast, (b) half as fast, (c) four times as fast, (d) one-fourth as fast, or (e) the same?
- As you travel down the highway in your car, an ambulance approaches you from the rear at a high speed

(Fig. OQ17.3) sounding its siren at a frequency of 500 Hz. Which statement is correct? (a) You hear a frequency less than 500 Hz. (b) You hear a frequency equal to 500 Hz. (c) You hear a frequency greater



Anthony Redpath/Corbis

Figure OQ17.3

- than 500 Hz. (d) You hear a frequency greater than 500 Hz, whereas the ambulance driver hears a frequency lower than 500 Hz. (e) You hear a frequency less than 500 Hz, whereas the ambulance driver hears a frequency of 500 Hz.
- What happens to a sound wave as it travels from air into water? (a) Its intensity increases. (b) Its wavelength decreases. (c) Its frequency increases. (d) Its frequency remains the same. (e) Its velocity decreases.
 - A church bell in a steeple rings once. At 300 m in front of the church, the maximum sound intensity is $2 \mu\text{W}/\text{m}^2$. At 950 m behind the church, the maximum intensity is $0.2 \mu\text{W}/\text{m}^2$. What is the main reason for the difference in the intensity? (a) Most of the sound is absorbed by the air before it gets far away from the source. (b) Most of the sound is absorbed by the ground as it travels away from the source. (c) The bell broadcasts the sound mostly toward the front. (d) At a larger distance, the power is spread over a larger area.
 - If a 1.00-kHz sound source moves at a speed of 50.0 m/s toward a listener who moves at a speed of 30.0 m/s in a direction away from the source, what is the apparent frequency heard by the listener? (a) 796 Hz (b) 949 Hz (c) 1 000 Hz (d) 1 068 Hz (e) 1 273 Hz
 - A sound wave can be characterized as (a) a transverse wave, (b) a longitudinal wave, (c) a transverse wave or a longitudinal wave, depending on the nature of its source, (d) one that carries no energy, or (e) a wave that does not require a medium to be transmitted from one place to the other.
 - Assume a change at the source of sound reduces the wavelength of a sound wave in air by a factor of 2. (i) What happens to its frequency? (a) It increases by a factor of 4. (b) It increases by a factor of 2. (c) It is unchanged. (d) It decreases by a factor of 2. (e) It changes by an unpredictable factor. (ii) What happens to its speed? Choose from the same possibilities as in part (i).
 - A point source broadcasts sound into a uniform medium. If the distance from the source is tripled, how does the intensity change? (a) It becomes one-ninth as large. (b) It becomes one-third as large. (c) It is unchanged. (d) It becomes three times larger. (e) It becomes nine times larger.
 - Suppose an observer and a source of sound are both at rest relative to the ground and a strong wind is blowing away from the source toward the observer. (i) What effect does the wind have on the observed frequency? (a) It causes an increase. (b) It causes a decrease. (c) It causes no change. (ii) What effect does the wind have on the observed wavelength? Choose from the same possibilities as in part (i). (iii) What effect does the wind have on the observed speed of the wave? Choose from the same possibilities as in part (i).
 - A source of sound vibrates with constant frequency. Rank the frequency of sound observed in the following cases from highest to the lowest. If two frequencies are equal, show their equality in your ranking. All the motions mentioned have the same speed, 25 m/s. (a) The source and observer are stationary. (b) The source is moving toward a stationary observer. (c) The source is moving away from a stationary observer. (d) The observer is moving toward a stationary source. (e) The observer is moving away from a stationary source.
 - With a sensitive sound-level meter, you measure the sound of a running spider as -10 dB . What does the negative sign imply? (a) The spider is moving away from you. (b) The frequency of the sound is too low to be audible to humans. (c) The intensity of the sound is too faint to be audible to humans. (d) You have made a mistake; negative signs do not fit with logarithms.
 - Doubling the power output from a sound source emitting a single frequency will result in what increase in decibel level? (a) 0.50 dB (b) 2.0 dB (c) 3.0 dB (d) 4.0 dB (e) above 20 dB
 - Of the following sounds, which one is most likely to have a sound level of 60 dB? (a) a rock concert (b) the turning of a page in this textbook (c) dinner-table conversation (d) a cheering crowd at a football game

Conceptual Questions

1. denotes answer available in *Student Solutions Manual/Study Guide*

- How can an object move with respect to an observer so that the sound from it is not shifted in frequency?
- Older auto-focus cameras sent out a pulse of sound and measured the time interval required for the pulse to reach an object, reflect off of it, and return to be detected. Can air temperature affect the camera's focus? New cameras use a more reliable infrared system.
- A friend sitting in her car far down the road waves to you and beeps her horn at the same moment. How far away must she be for you to calculate the speed of sound to two significant figures by measuring the time interval required for the sound to reach you?
- How can you determine that the speed of sound is the same for all frequencies by listening to a band or orchestra?
- Explain how the distance to a lightning bolt (Fig. CQ17.5) can be determined by counting the seconds between the flash and the sound of thunder.
- You are driving toward a cliff and honk your horn. Is there a Doppler shift of the sound when you hear the echo? If so, is it like a moving source or a moving observer? What if the reflection occurs not from a cliff, but from the forward edge of a huge alien spacecraft moving toward you as you drive?



Figure CQ17.5

7. The radar systems used by police to detect speeders are sensitive to the Doppler shift of a pulse of microwaves. Discuss how this sensitivity can be used to measure the speed of a car.
8. *The Tunguska event.* On June 30, 1908, a meteor burned up and exploded in the atmosphere above the Tunguska River valley in Siberia. It knocked down trees over thousands of square kilometers and started a forest fire, but produced no crater and apparently caused no human casualties. A witness sitting on his doorstep outside the zone of falling trees recalled events in the following sequence. He saw a moving light in the sky, brighter than the Sun and descending

at a low angle to the horizon. He felt his face become warm. He felt the ground shake. An invisible agent picked him up and immediately dropped him about a meter from where he had been seated. He heard a very loud protracted rumbling. Suggest an explanation for these observations and for the order in which they happened.

9. A sonic ranger is a device that determines the distance to an object by sending out an ultrasonic sound pulse and measuring the time interval required for the wave to return by reflection from the object. Typically, these devices cannot reliably detect an object that is less than half a meter from the sensor. Why is that?

Problems

ENHANCED WebAssign The problems found in this chapter may be assigned online in Enhanced WebAssign

1. straightforward; 2. intermediate; 3. challenging

1. full solution available in the *Student Solutions Manual/Study Guide*

AMT Analysis Model tutorial available in Enhanced WebAssign

GP Guided Problem

M Master It tutorial available in Enhanced WebAssign

W Watch It video solution available in Enhanced WebAssign

Note: Throughout this chapter, pressure variations ΔP are measured relative to atmospheric pressure, 1.013×10^5 Pa.

Section 17.1 Pressure Variations in Sound Waves

1. A sinusoidal sound wave moves through a medium and **W** is described by the displacement wave function

$$s(x, t) = 2.00 \cos(15.7x - 858t)$$

where s is in micrometers, x is in meters, and t is in seconds. Find (a) the amplitude, (b) the wavelength, and (c) the speed of this wave. (d) Determine the instantaneous displacement from equilibrium of the elements of the medium at the position $x = 0.0500$ m at $t = 3.00$ ms. (e) Determine the maximum speed of the element's oscillatory motion.

2. As a certain sound wave travels through the air, it produces pressure variations (above and below atmospheric pressure) given by $\Delta P = 1.27 \sin(\pi x - 340\pi t)$ in SI units. Find (a) the amplitude of the pressure variations, (b) the frequency, (c) the wavelength in air, and (d) the speed of the sound wave.

3. Write an expression that describes the pressure variation as a function of position and time for a sinusoidal sound wave in air. Assume the speed of sound is 343 m/s, $\lambda = 0.100$ m, and $\Delta P_{\max} = 0.200$ Pa.

Section 17.2 Speed of Sound Waves

Problem 85 in Chapter 2 can also be assigned with this section.

Note: In the rest of this chapter, unless otherwise specified, the equilibrium density of air is $\rho = 1.20$ kg/m³ and the speed of sound in air is $v = 343$ m/s. Use Table 17.1 to find speeds of sound in other media.

4. **M** An experimenter wishes to generate in air a sound wave that has a displacement amplitude of 5.50×10^{-6} m. The pressure amplitude is to be limited to 0.840 Pa. What is the minimum wavelength the sound wave can have?

5. Calculate the pressure amplitude of a 2.00-kHz sound wave in air, assuming that the displacement amplitude is equal to 2.00×10^{-8} m.

6. Earthquakes at fault lines in the Earth's crust create seismic waves, which are longitudinal (P waves) or transverse (S waves). The P waves have a speed of about 7 km/s. Estimate the average bulk modulus of the Earth's crust given that the density of rock is about 2500 kg/m³.

7. A dolphin (Fig. P17.7) in seawater at a temperature of 25°C emits a sound wave directed toward the ocean floor 150 m below. How much time passes before it hears an echo?

8. A sound wave propagates in air at 27°C with frequency 4.00 kHz. It passes through a region where the temperature gradually changes and then moves through air at 0°C. Give numerical answers to the following questions to the extent possible and state your reasoning about what happens to the wave physically. (a) What happens to the speed of the wave? (b) What happens to its frequency? (c) What happens to its wavelength?

9. Ultrasound is used in medicine both for diagnostic imaging (Fig. P17.9, page 526) and for therapy. For



Stephen Frink/Photographer's Choice/Getty Images

Figure P17.7

diagnosis, short pulses of ultrasound are passed through the patient's body. An echo reflected from a structure of interest is recorded, and the distance to the structure can be determined from the time delay for the echo's return. To reveal detail, the wavelength of the reflected ultrasound must be small compared to the size of the object reflecting the wave. The speed of ultrasound in human tissue is about 1 500 m/s (nearly the same as the speed of sound in water). (a) What is the wavelength of ultrasound with a frequency of 2.40 MHz? (b) In the whole set of imaging techniques, frequencies in the range 1.00 MHz to 20.0 MHz are used. What is the range of wavelengths corresponding to this range of frequencies?



B. Benoit/Photo Researchers, Inc.

Figure P17.9 A view of a fetus in the uterus made with ultrasound imaging.

10. A sound wave in air has a pressure amplitude equal to **W** 4.00×10^{-3} Pa. Calculate the displacement amplitude of the wave at a frequency of 10.0 kHz.

11. Suppose you hear a clap of thunder 16.2 s after seeing the associated lightning strike. The speed of light in air is 3.00×10^8 m/s. (a) How far are you from the lightning strike? (b) Do you need to know the value of the speed of light to answer? Explain.

12. A rescue plane flies horizontally at a constant speed **W** searching for a disabled boat. When the plane is directly above the boat, the boat's crew blows a loud horn. By the time the plane's sound detector receives the horn's sound, the plane has traveled a distance equal to half its altitude above the ocean. Assuming it takes the sound 2.00 s to reach the plane, determine (a) the speed of the plane and (b) its altitude.

13. A flowerpot is knocked off a window ledge from a height $d =$ **AMT** **W** 20.0 m above the sidewalk as shown in Figure P17.13. It falls toward an unsuspecting man of height $h = 1.75$ m who is standing below. Assume the man requires a time interval of $\Delta t = 0.300$ s to respond to the warning. How close to the sidewalk can the flowerpot fall before it is too late for a warning shouted from the balcony to reach the man in time?

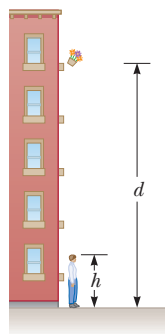


Figure P17.13 Problems 13 and 14.

14. A flowerpot is knocked off a balcony from a height d above the sidewalk as shown in Figure P17.13. It falls toward an unsuspecting man of height h who is standing below. Assume the man requires a time interval of Δt to respond to the warning. How close to the sidewalk can the flowerpot fall before it is too late for a warning shouted from the balcony to reach the man in time? Use the symbol v for the speed of sound.

15. The speed of sound in air (in meters per second) depends on temperature according to the approximate expression

$$v = 331.5 + 0.607T_C$$

where T_C is the Celsius temperature. In dry air, the temperature decreases about 1°C for every 150-m rise in altitude. (a) Assume this change is constant up to an altitude of 9 000 m. What time interval is required for the sound from an airplane flying at 9 000 m to reach the ground on a day when the ground temperature is 30°C ? (b) **What If?** Compare your answer with the time interval required if the air were uniformly at 30°C . Which time interval is longer?

16. A sound wave moves down a cylinder as in Figure 17.2. Show that the pressure variation of the wave is described by $\Delta P = \pm \rho v \omega \sqrt{s_{\text{max}}^2 - s^2}$, where $s = s(x, t)$ is given by Equation 17.1.

17. A hammer strikes one end of a thick iron rail of length 8.50 m. A microphone located at the opposite end of the rail detects two pulses of sound, one that travels through the air and a longitudinal wave that travels through the rail. (a) Which pulse reaches the microphone first? (b) Find the separation in time between the arrivals of the two pulses.

18. A cowboy stands on horizontal ground between two parallel, vertical cliffs. He is not midway between the cliffs. He fires a shot and hears its echoes. The second echo arrives 1.92 s after the first and 1.47 s before the third. Consider only the sound traveling parallel to the ground and reflecting from the cliffs. (a) What is the distance between the cliffs? (b) **What If?** If he can hear a fourth echo, how long after the third echo does it arrive?

Section 17.3 Intensity of Periodic Sound Waves

19. Calculate the sound level (in decibels) of a sound wave that has an intensity of $4.00 \mu\text{W}/\text{m}^2$.

20. The area of a typical eardrum is about $5.00 \times 10^{-5} \text{ m}^2$. (a) Calculate the average sound power incident on an eardrum at the threshold of pain, which corresponds to an intensity of $1.00 \text{ W}/\text{m}^2$. (b) How much energy is transferred to the eardrum exposed to this sound for 1.00 min?

21. The intensity of a sound wave at a fixed distance from a speaker vibrating at 1.00 kHz is $0.600 \text{ W}/\text{m}^2$. (a) Determine the intensity that results if the frequency is increased to 2.50 kHz while a constant displacement amplitude is maintained. (b) Calculate the intensity if the frequency is reduced to 0.500 kHz and the displacement amplitude is doubled.

22. The intensity of a sound wave at a fixed distance from a speaker vibrating at a frequency f is I . (a) Determine the intensity that results if the frequency is increased to f' while a constant displacement amplitude is maintained. (b) Calculate the intensity if the frequency is reduced to $f/2$ and the displacement amplitude is doubled.
23. A person wears a hearing aid that uniformly increases the sound level of all audible frequencies of sound by 30.0 dB. The hearing aid picks up sound having a frequency of 250 Hz at an intensity of $3.0 \times 10^{-11} \text{ W/m}^2$. What is the intensity delivered to the eardrum?
24. The sound intensity at a distance of 16 m from a noisy generator is measured to be 0.25 W/m^2 . What is the sound intensity at a distance of 28 m from the generator?
25. The power output of a certain public-address speaker **W** is 6.00 W. Suppose it broadcasts equally in all directions. (a) Within what distance from the speaker would the sound be painful to the ear? (b) At what distance from the speaker would the sound be barely audible?
26. A sound wave from a police siren has an intensity of 100.0 W/m^2 at a certain point; a second sound wave from a nearby ambulance has an intensity level that is 10 dB greater than the police siren's sound wave at the same point. What is the sound level of the sound wave due to the ambulance?
27. A train sounds its horn as it approaches an intersection. **M** The horn can just be heard at a level of 50 dB by an observer 10 km away. (a) What is the average power generated by the horn? (b) What intensity level of the horn's sound is observed by someone waiting at an intersection 50 m from the train? Treat the horn as a point source and neglect any absorption of sound by the air.
28. As the people sing in church, the sound level everywhere inside is 101 dB. No sound is transmitted through the massive walls, but all the windows and doors are open on a summer morning. Their total area is 22.0 m^2 . (a) How much sound energy is radiated through the windows and doors in 20.0 min? (b) Suppose the ground is a good reflector and sound radiates from the church uniformly in all horizontal and upward directions. Find the sound level 1.00 km away.
29. The most soaring vocal melody is in Johann Sebastian Bach's Mass in B Minor. In one section, the basses, tenors, altos, and sopranos carry the melody from a low D to a high A. In concert pitch, these notes are now assigned frequencies of 146.8 Hz and 880.0 Hz. Find the wavelengths of (a) the initial note and (b) the final note. Assume the chorus sings the melody with a uniform sound level of 75.0 dB. Find the pressure amplitudes of (c) the initial note and (d) the final note. Find the displacement amplitudes of (e) the initial note and (f) the final note.
30. Show that the difference between decibel levels β_1 and β_2 of a sound is related to the ratio of the distances r_1 and r_2 from the sound source by

$$\beta_2 - \beta_1 = 20 \log \left(\frac{r_1}{r_2} \right)$$

31. **M** A family ice show is held at an enclosed arena. The skaters perform to music with level 80.0 dB. This level is too loud for your baby, who yells at 75.0 dB. (a) What total sound intensity engulfs you? (b) What is the combined sound level?
32. **W** Two small speakers emit sound waves of different frequencies equally in all directions. Speaker A has an output of 1.00 mW, and speaker B has an output of 1.50 mW. Determine the sound level (in decibels) at point C in Figure P17.32 assuming (a) only speaker A emits sound, (b) only speaker B emits sound, and (c) both speakers emit sound.

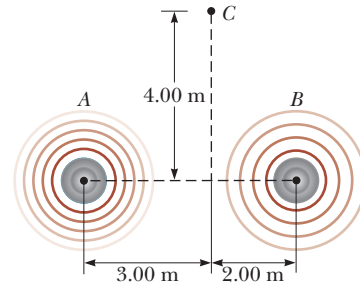


Figure P17.32

33. **M** A firework charge is detonated many meters above the ground. At a distance of $d_1 = 500 \text{ m}$ from the explosion, the acoustic pressure reaches a maximum of $\Delta P_{\text{max}} = 10.0 \text{ Pa}$ (Fig. P17.33). Assume the speed of sound is constant at 343 m/s throughout the atmosphere over the region considered, the ground absorbs all the sound falling on it, and the air absorbs sound energy as described by the rate 7.00 dB/km. What is the sound level (in decibels) at a distance of $d_2 = 4.00 \times 10^3 \text{ m}$ from the explosion?

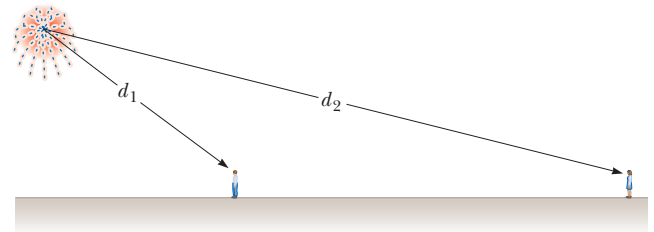


Figure P17.33

34. A fireworks rocket explodes at a height of 100 m above the ground. An observer on the ground directly under the explosion experiences an average sound intensity of $7.00 \times 10^{-2} \text{ W/m}^2$ for 0.200 s. (a) What is the total amount of energy transferred away from the explosion by sound? (b) What is the sound level (in decibels) heard by the observer?
35. **M** The sound level at a distance of 3.00 m from a source is 120 dB. At what distance is the sound level (a) 100 dB and (b) 10.0 dB?
36. *Why is the following situation impossible?* It is early on a Saturday morning, and much to your displeasure your next-door neighbor starts mowing his lawn. As you try to get back to sleep, your next-door neighbor on the other side of your house also begins to mow the lawn


with an identical mower the same distance away. This situation annoys you greatly because the total sound now has twice the loudness it had when only one neighbor was mowing.

Section 17.4 The Doppler Effect

37. An ambulance moving at 42 m/s sounds its siren whose frequency is 450 Hz. A car is moving in the same direction as the ambulance at 25 m/s. What frequency does a person in the car hear (a) as the ambulance approaches the car? (b) After the ambulance passes the car?

38. When high-energy charged particles move through a transparent medium with a speed greater than the speed of light in that medium, a shock wave, or bow wave, of light is produced. This phenomenon is called the *Cerenkov effect*. When a nuclear reactor is shielded by a large pool of water, Cerenkov radiation can be seen as a blue glow in the vicinity of the reactor core due to high-speed electrons moving through the water (Fig. 17.38).

In a particular case, the Cerenkov radiation produces a wave front with an apex half-angle of 53.0° . Calculate the speed of the electrons in the water. The speed of light in water is 2.25×10^8 m/s.



U.S. Department of Energy/Photo Researchers, Inc.

Figure P17.38

39. A driver travels northbound on a highway at a speed of 25.0 m/s. A police car, traveling southbound at a speed of 40.0 m/s, approaches with its siren producing sound at a frequency of 2 500 Hz. (a) What frequency does the driver observe as the police car approaches? (b) What frequency does the driver detect after the police car passes him? (c) Repeat parts (a) and (b) for the case when the police car is behind the driver and travels northbound.

40. Submarine A travels horizontally at 11.0 m/s through ocean water. It emits a sonar signal of frequency $f = 5.27 \times 10^3$ Hz in the forward direction. Submarine B is in front of submarine A and traveling at 3.00 m/s relative to the water in the same direction as submarine A. A crewman in submarine B uses his equipment to detect the sound waves (“pings”) from submarine A. We wish to determine what is heard by the crewman in submarine B. (a) An observer on which submarine detects a frequency f' as described by Equation 17.19? (b) In Equation 17.19, should the sign of v_s be positive or negative? (c) In Equation 17.19, should the sign of v_o be positive or negative? (d) In Equation 17.19, what speed of sound should be used? (e) Find the frequency of the sound detected by the crewman on submarine B.

41. Review. A block with a speaker bolted to it is connected to a spring having spring constant $k = 20.0$ N/m and oscillates as shown in Figure P17.41. The total mass of the block and speaker is 5.00 kg, and the

amplitude of this unit’s motion is 0.500 m. The speaker emits sound waves of frequency 440 Hz. Determine (a) the highest and (b) the lowest frequencies heard by the person to the right of the speaker. (c) If the maximum sound level heard by the person is 60.0 dB when the speaker is at its closest distance $d = 1.00$ m from him, what is the minimum sound level heard by the observer?

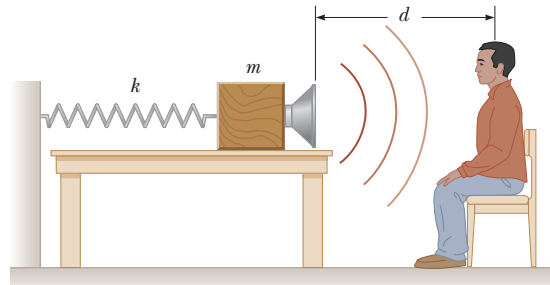


Figure P17.41 Problems 41 and 42.

42. Review. A block with a speaker bolted to it is connected to a spring having spring constant k and oscillates as shown in Figure P17.41. The total mass of the block and speaker is m , and the amplitude of this unit’s motion is A . The speaker emits sound waves of frequency f . Determine (a) the highest and (b) the lowest frequencies heard by the person to the right of the speaker. (c) If the maximum sound level heard by the person is β when the speaker is at its closest distance d from him, what is the minimum sound level heard by the observer?

43. Expectant parents are thrilled to hear their unborn baby’s heartbeat, revealed by an ultrasonic detector that produces beeps of audible sound in synchronization with the fetal heartbeat. Suppose the fetus’s ventricular wall moves in simple harmonic motion with an amplitude of 1.80 mm and a frequency of 115 beats per minute. (a) Find the maximum linear speed of the heart wall. Suppose a source mounted on the detector in contact with the mother’s abdomen produces sound at 2 000 000.0 Hz, which travels through tissue at 1.50 km/s. (b) Find the maximum change in frequency between the sound that arrives at the wall of the baby’s heart and the sound emitted by the source. (c) Find the maximum change in frequency between the reflected sound received by the detector and that emitted by the source.

44. Why is the following situation impossible? At the Summer Olympics, an athlete runs at a constant speed down a straight track while a spectator near the edge of the track blows a note on a horn with a fixed frequency. When the athlete passes the horn, she hears the frequency of the horn fall by the musical interval called a minor third. That is, the frequency she hears drops to five-sixths its original value.

45. Standing at a crosswalk, you hear a frequency of 560 Hz from the siren of an approaching ambulance. After the ambulance passes, the observed frequency of

the siren is 480 Hz. Determine the ambulance's speed from these observations.

46. **Review.** A tuning fork vibrating at 512 Hz falls from rest and accelerates at 9.80 m/s^2 . How far below the point of release is the tuning fork when waves of frequency 485 Hz reach the release point?

47. **AMT** A supersonic jet traveling at Mach 3.00 at an altitude of $h = 20\,000 \text{ m}$ is directly over a person at time $t = 0$ as shown in Figure P17.47. Assume the average speed of sound in air is 335 m/s over the path of the sound. (a) At what time will the person encounter the shock wave due to the sound emitted at $t = 0$? (b) Where will the plane be when this shock wave is heard?

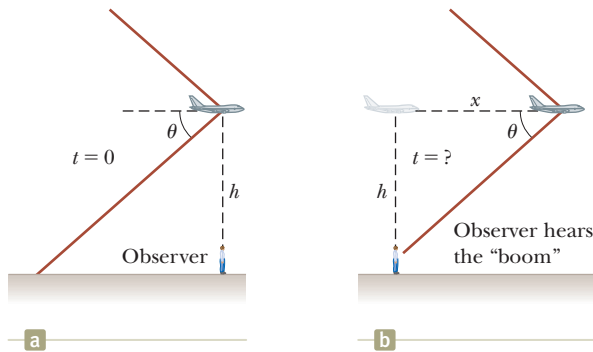


Figure P17.47

Additional Problems

48. A bat (Fig. P17.48) can detect very small objects, such as an insect whose length is approximately equal to one wavelength of the sound the bat makes. If a bat emits chirps at a frequency of 60.0 kHz and the speed of sound in air is 340 m/s , what is the smallest insect the bat can detect?



Figure P17.48 Problems 48 and 63.

49. Some studies suggest that the upper frequency limit of hearing is determined by the diameter of the eardrum. The diameter of the eardrum is approximately equal to half the wavelength of the sound wave at this upper limit. If the relationship holds exactly, what is the diameter of the eardrum of a person capable of hearing $20\,000 \text{ Hz}$? (Assume a body temperature of 37.0°C .)
50. The highest note written for a singer in a published score was F-sharp above high C, 1.480 kHz , for Zerbinetta in the original version of Richard Strauss's opera *Ariadne auf Naxos*. (a) Find the wavelength of this sound in air. (b) Suppose people in the fourth row of seats hear this note with level 81.0 dB . Find the displacement amplitude of the sound. (c) **What If?** In response

to complaints, Strauss later transposed the note down to F above high C, 1.397 kHz . By what increment did the wavelength change?

51. Trucks carrying garbage to the town dump form a nearly steady procession on a country road, all traveling at 19.7 m/s in the same direction. Two trucks arrive at the dump every 3 min. A bicyclist is also traveling toward the dump, at 4.47 m/s . (a) With what frequency do the trucks pass the cyclist? (b) **What If?** A hill does not slow down the trucks, but makes the out-of-shape cyclist's speed drop to 1.56 m/s . How often do the trucks whiz past the cyclist now?
52. If a salesman claims a loudspeaker is rated at 150 W , he is referring to the maximum electrical power input to the speaker. Assume a loudspeaker with an input power of 150 W broadcasts sound equally in all directions and produces sound with a level of 103 dB at a distance of 1.60 m from its center. (a) Find its sound power output. (b) Find the efficiency of the speaker, that is, the fraction of input power that is converted into useful output power.
53. An interstate highway has been built through a neighborhood in a city. In the afternoon, the sound level in an apartment in the neighborhood is 80.0 dB as 100 cars pass outside the window every minute. Late at night, the traffic flow is only five cars per minute. What is the average late-night sound level?

54. A train whistle ($f = 400 \text{ Hz}$) sounds higher or lower in frequency depending on whether it approaches or recedes. (a) Prove that the difference in frequency between the approaching and receding train whistle is

$$\Delta f = \frac{2u/v}{1 - u^2/v^2} f$$

where u is the speed of the train and v is the speed of sound. (b) Calculate this difference for a train moving at a speed of 130 km/h . Take the speed of sound in air to be 340 m/s .

55. An ultrasonic tape measure uses frequencies above 20 MHz to determine dimensions of structures such as buildings. It does so by emitting a pulse of ultrasound into air and then measuring the time interval for an echo to return from a reflecting surface whose distance away is to be measured. The distance is displayed as a digital readout. For a tape measure that emits a pulse of ultrasound with a frequency of 22.0 MHz , (a) what is the distance to an object from which the echo pulse returns after 24.0 ms when the air temperature is 26°C ? (b) What should be the duration of the emitted pulse if it is to include ten cycles of the ultrasonic wave? (c) What is the spatial length of such a pulse?
56. The tensile stress in a thick copper bar is 99.5% of its elastic breaking point of $13.0 \times 10^{10} \text{ N/m}^2$. If a 500-Hz sound wave is transmitted through the material, (a) what displacement amplitude will cause the bar to break? (b) What is the maximum speed of the elements of copper at this moment? (c) What is the sound intensity in the bar?

- 57. Review.** A 150-g glider moves at $v_1 = 2.30$ m/s on an air track toward an originally stationary 200-g glider as shown in Figure P17.57. The gliders undergo a completely inelastic collision and latch together over a time interval of 7.00 ms. A student suggests roughly half the decrease in mechanical energy of the two-glider system is transferred to the environment by sound. Is this suggestion reasonable? To evaluate the idea, find the implied sound level at a position 0.800 m from the gliders. If the student's idea is unreasonable, suggest a better idea.

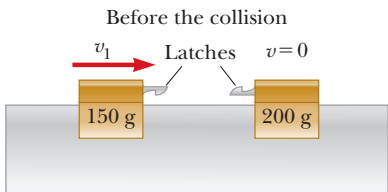


Figure P17.57

- 58.** Consider the following wave function in SI units:

$$\Delta P(r, t) = \left(\frac{25.0}{r} \right) \sin(1.36r - 2030t)$$

Explain how this wave function can apply to a wave radiating from a small source, with r being the radial distance from the center of the source to any point outside the source. Give the most detailed description of the wave that you can. Include answers to such questions as the following and give representative values for any quantities that can be evaluated. (a) Does the wave move more toward the right or the left? (b) As it moves away from the source, what happens to its amplitude? (c) Its speed? (d) Its frequency? (e) Its wavelength? (f) Its power? (g) Its intensity?

- 59. Review.** For a certain type of steel, stress is always proportional to strain with Young's modulus 20×10^{10} N/m². The steel has density 7.86×10^3 kg/m³. It will fail by bending permanently if subjected to compressive stress greater than its yield strength $\sigma_y = 400$ MPa. A rod 80.0 cm long, made of this steel, is fired at 12.0 m/s straight at a very hard wall. (a) The speed of a one-dimensional compressional wave moving along the rod is given by $v = \sqrt{Y/\rho}$, where Y is Young's modulus for the rod and ρ is the density. Calculate this speed. (b) After the front end of the rod hits the wall and stops, the back end of the rod keeps moving as described by Newton's first law until it is stopped by excess pressure in a sound wave moving back through the rod. What time interval elapses before the back end of the rod receives the message that it should stop? (c) How far has the back end of the rod moved in this time interval? Find (d) the strain and (e) the stress in the rod. (f) If it is not to fail, what is the maximum impact speed a rod can have in terms of σ_y , Y , and ρ ?
- 60.** A large set of unoccupied football bleachers has solid seats and risers. You stand on the field in front of the bleachers and sharply clap two wooden boards

together once. The sound pulse you produce has no definite frequency and no wavelength. The sound you hear reflected from the bleachers has an identifiable frequency and may remind you of a short toot on a trumpet, buzzer, or kazoo. (a) Explain what accounts for this sound. Compute order-of-magnitude estimates for (b) the frequency, (c) the wavelength, and (d) the duration of the sound on the basis of data you specify.

- 61. M** To measure her speed, a skydiver carries a buzzer emitting a steady tone at 1 800 Hz. A friend on the ground at the landing site directly below listens to the amplified sound he receives. Assume the air is calm and the speed of sound is independent of altitude. While the skydiver is falling at terminal speed, her friend on the ground receives waves of frequency 2 150 Hz. (a) What is the skydiver's speed of descent? (b) **What If?** Suppose the skydiver can hear the sound of the buzzer reflected from the ground. What frequency does she receive?

- 62.** Spherical waves of wavelength 45.0 cm propagate outward from a point source. (a) Explain how the intensity at a distance of 240 cm compares with the intensity at a distance of 60.0 cm. (b) Explain how the amplitude at a distance of 240 cm compares with the amplitude at a distance of 60.0 cm. (c) Explain how the phase of the wave at a distance of 240 cm compares with the phase at 60.0 cm at the same moment.
- 63.** A bat (Fig. P17.48), moving at 5.00 m/s, is chasing a flying insect. If the bat emits a 40.0-kHz chirp and receives back an echo at 40.4 kHz, (a) what is the speed of the insect? (b) Will the bat be able to catch the insect? Explain.

- 64.** Two ships are moving along a line due east (Fig. P17.64). The trailing vessel has a speed relative to a land-based observation point of $v_1 = 64.0$ km/h, and the leading ship has a speed of $v_2 = 45.0$ km/h relative to that point. The two ships are in a region of the ocean where the current is moving uniformly due west at $v_{\text{current}} = 10.0$ km/h. The trailing ship transmits a sonar signal at a frequency of 1 200.0 Hz through the water. What frequency is monitored by the leading ship?

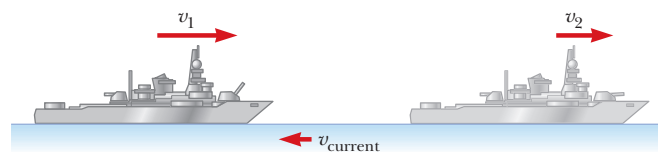


Figure P17.64

- 65.** A police car is traveling east at 40.0 m/s along a straight road, overtaking a car ahead of it moving east at 30.0 m/s. The police car has a malfunctioning siren that is stuck at 1 000 Hz. (a) What would be the wavelength in air of the siren sound if the police car were at rest? (b) What is the wavelength in front of the police car? (c) What is it behind the police car? (d) What is the frequency heard by the driver being chased?

66. The speed of a one-dimensional compressional wave traveling along a thin copper rod is 3.56 km/s. The rod is given a sharp hammer blow at one end. A listener at the far end of the rod hears the sound twice, transmitted through the metal and through air, with a time interval Δt between the two pulses. (a) Which sound arrives first? (b) Find the length of the rod as a function of Δt . (c) Find the length of the rod if $\Delta t = 127$ ms. (d) Imagine that the copper rod is replaced by another material through which the speed of sound is v_r . What is the length of the rod in terms of t and v_r ? (e) Would the answer to part (d) go to a well-defined limit as the speed of sound in the rod goes to infinity? Explain your answer.

67. A large meteoroid enters the Earth's atmosphere at a speed of 20.0 km/s and is not significantly slowed before entering the ocean. (a) What is the Mach angle of the shock wave from the meteoroid in the lower atmosphere? (b) If we assume the meteoroid survives the impact with the ocean surface, what is the (initial) Mach angle of the shock wave the meteoroid produces in the water?

68. Three metal rods are located relative to each other as shown in Figure P17.68, where $L_3 = L_1 + L_2$. The speed of sound in a rod is given by $v = \sqrt{Y/\rho}$, where Y

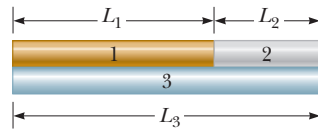


Figure P17.68

is Young's modulus for the rod and ρ is the density. Values of density and Young's modulus for the three materials are $\rho_1 = 2.70 \times 10^3$ kg/m³, $Y_1 = 7.00 \times 10^{10}$ N/m², $\rho_2 = 11.3 \times 10^3$ kg/m³, $Y_2 = 1.60 \times 10^{10}$ N/m², $\rho_3 = 8.80 \times 10^3$ kg/m³, $Y_3 = 11.0 \times 10^{10}$ N/m². If $L_3 = 1.50$ m, what must the ratio L_1/L_2 be if a sound wave is to travel the length of rods 1 and 2 in the same time interval required for the wave to travel the length of rod 3?

69. With particular experimental methods, it is possible to produce and observe in a long, thin rod both a transverse wave whose speed depends primarily on tension in the rod and a longitudinal wave whose speed is determined by Young's modulus and the density of the material according to the expression $v = \sqrt{Y/\rho}$. The transverse wave can be modeled as a wave in a stretched string. A particular metal rod is 150 cm long and has a radius of 0.200 cm and a mass of 50.9 g. Young's modulus for the material is 6.80×10^{10} N/m². What must the tension in the rod be if the ratio of the speed of longitudinal waves to the speed of transverse waves is 8.00?

70. A siren mounted on the roof of a firehouse emits sound at a frequency of 900 Hz. A steady wind is blowing with a speed of 15.0 m/s. Taking the speed of sound in calm air to be 343 m/s, find the wavelength of the sound (a) upwind of the siren and (b) downwind of the siren. Firefighters are approaching the siren from various directions at 15.0 m/s. What frequency does a firefighter hear (c) if she is approaching

from an upwind position so that she is moving in the direction in which the wind is blowing and (d) if she is approaching from a downwind position and moving against the wind?

Challenge Problems

71. The Doppler equation presented in the text is valid when the motion between the observer and the source occurs on a straight line so that the source and observer are moving either directly toward or directly away from each other. If this restriction is relaxed, one must use the more general Doppler equation

$$f' = \left(\frac{v + v_o \cos \theta_o}{v - v_s \cos \theta_s} \right) f$$

where θ_o and θ_s are defined in Figure P17.71a. Use the preceding equation to solve the following problem. A train moves at a constant speed of $v = 25.0$ m/s toward the intersection shown in Figure P17.71b. A car is stopped near the crossing, 30.0 m from the tracks. The train's horn emits a frequency of 500 Hz when the train is 40.0 m from the intersection. (a) What is the frequency heard by the passengers in the car? (b) If the train emits this sound continuously and the car is stationary at this position long before the train arrives until long after it leaves, what range of frequencies do passengers in the car hear? (c) Suppose the car is foolishly trying to beat the train to the intersection and is traveling at 40.0 m/s toward the tracks. When the car is 30.0 m from the tracks and the train is 40.0 m from the intersection, what is the frequency heard by the passengers in the car now?

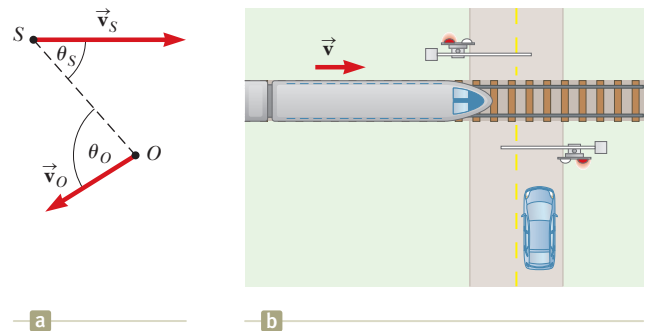


Figure P17.71

72. In Section 17.2, we derived the speed of sound in a gas using the impulse–momentum theorem applied to the cylinder of gas in Figure 17.5. Let us find the speed of sound in a gas using a different approach based on the element of gas in Figure 17.3. Proceed as follows. (a) Draw a force diagram for this element showing the forces exerted on the left and right surfaces due to the pressure of the gas on either side of the element. (b) By applying Newton's second law to the element, show that

$$-\frac{\partial(\Delta P)}{\partial x} A \Delta x = \rho A \Delta x \frac{\partial^2 s}{\partial t^2}$$

(c) By substituting $\Delta P = -(B \partial s / \partial x)$ (Eq. 17.3), derive the following wave equation for sound:

$$\frac{B}{\rho} \frac{\partial^2 s}{\partial x^2} = \frac{\partial^2 s}{\partial t^2}$$

(d) To a mathematical physicist, this equation demonstrates the existence of sound waves and determines their speed. As a physics student, you must take another step or two. Substitute into the wave equation the trial solution $s(x, t) = s_{\max} \cos(kx - \omega t)$. Show that this function satisfies the wave equation, provided $\omega/k = v = \sqrt{B/\rho}$.

73. Equation 17.13 states that at distance r away from a point source with power $(Power)_{\text{avg}}$, the wave intensity is

$$I = \frac{(Power)_{\text{avg}}}{4\pi r^2}$$


Study Figure 17.10 and prove that at distance r straight in front of a point source with power $(Power)_{\text{avg}}$ moving with constant speed v_s the wave intensity is

$$I = \frac{(Power)_{\text{avg}}}{4\pi r^2} \left(\frac{v - v_s}{v} \right)$$

Superposition and Standing Waves

CHAPTER

18



- 18.1 Analysis Model: Waves in Interference
- 18.2 Standing Waves
- 18.3 Analysis Model: Waves Under Boundary Conditions
- 18.4 Resonance
- 18.5 Standing Waves in Air Columns
- 18.6 Standing Waves in Rods and Membranes
- 18.7 Beats: Interference in Time
- 18.8 Nonsinusoidal Wave Patterns

The wave model was introduced in the previous two chapters. We have seen that waves are very different from particles. A particle is of zero size, whereas a wave has a characteristic size, its wavelength. Another important difference between waves and particles is that we can explore the possibility of two or more waves combining at one point in the same medium. Particles can be combined to form extended objects, but the particles must be at *different* locations. In contrast, two waves can both be present at the same location. The ramifications of this possibility are explored in this chapter.

When waves are combined in systems with boundary conditions, only certain allowed frequencies can exist and we say the frequencies are *quantized*. Quantization is a notion that is at the heart of quantum mechanics, a subject introduced formally in Chapter 40. There we show that analysis of waves under boundary conditions explains many of the quantum phenomena. In this chapter, we use quantization to understand the behavior of the wide array of musical instruments that are based on strings and air columns.

Blues master B. B. King takes advantage of standing waves on strings. He changes to higher notes on the guitar by pushing the strings against the frets on the fingerboard, shortening the lengths of the portions of the strings that vibrate. (AP Photo/Danny Moloshok)

We also consider the combination of waves having different frequencies. When two sound waves having nearly the same frequency interfere, we hear variations in the loudness called *beats*. Finally, we discuss how any nonsinusoidal periodic wave can be described as a sum of sine and cosine functions.

18.1 Analysis Model: Waves in Interference

Many interesting wave phenomena in nature cannot be described by a single traveling wave. Instead, one must analyze these phenomena in terms of a combination of traveling waves. As noted in the introduction, waves have a remarkable difference from particles in that waves can be combined at the *same* location in space. To analyze such wave combinations, we make use of the **superposition principle**:

Superposition principle ►

If two or more traveling waves are moving through a medium, the resultant value of the wave function at any point is the algebraic sum of the values of the wave functions of the individual waves.

Waves that obey this principle are called *linear waves*. (See Section 16.6.) In the case of mechanical waves, linear waves are generally characterized by having amplitudes much smaller than their wavelengths. Waves that violate the superposition principle are called *nonlinear waves* and are often characterized by large amplitudes. In this book, we deal only with linear waves.

One consequence of the superposition principle is that two traveling waves can pass through each other without being destroyed or even altered. For instance, when two pebbles are thrown into a pond and hit the surface at different locations, the expanding circular surface waves from the two locations simply pass through each other with no permanent effect. The resulting complex pattern can be viewed as two independent sets of expanding circles.

Figure 18.1 is a pictorial representation of the superposition of two pulses. The wave function for the pulse moving to the right is y_1 , and the wave function for the pulse moving to the left is y_2 . The pulses have the same speed but different shapes, and the displacement of the elements of the medium is in the positive y direction for both pulses. When the waves overlap (Fig. 18.1b), the wave function for the resulting complex wave is given by $y_1 + y_2$. When the crests of the pulses coincide (Fig. 18.1c), the resulting wave given by $y_1 + y_2$ has a larger amplitude than that of the individual pulses. The two pulses finally separate and continue moving in their original directions (Fig. 18.1d). Notice that the pulse shapes remain unchanged after the interaction, as if the two pulses had never met!

The combination of separate waves in the same region of space to produce a resultant wave is called **interference**. For the two pulses shown in Figure 18.1, the displacement of the elements of the medium is in the positive y direction for both pulses, and the resultant pulse (created when the individual pulses overlap) exhibits an amplitude greater than that of either individual pulse. Because the displacements caused by the two pulses are in the same direction, we refer to their superposition as **constructive interference**.

Now consider two pulses traveling in opposite directions on a taut string where one pulse is inverted relative to the other as illustrated in Figure 18.2. When these pulses begin to overlap, the resultant pulse is given by $y_1 + y_2$, but the values of the function y_2 are negative. Again, the two pulses pass through each other; because the displacements caused by the two pulses are in opposite directions, however, we refer to their superposition as **destructive interference**.

The superposition principle is the centerpiece of the analysis model called **waves in interference**. In many situations, both in acoustics and optics, waves combine according to this principle and exhibit interesting phenomena with practical applications.

Pitfall Prevention 18.1

Do Waves Actually Interfere? In popular usage, the term *interfere* implies that an agent affects a situation in some way so as to preclude something from happening. For example, in American football, *pass interference* means that a defending player has affected the receiver so that the receiver is unable to catch the ball. This usage is very different from its use in physics, where waves pass through each other and interfere, but do not affect each other in any way. In physics, interference is similar to the notion of *combination* as described in this chapter.

Constructive interference ►

Destructive interference ►

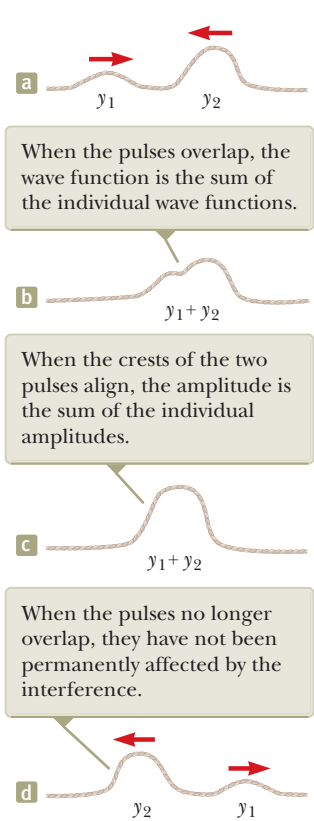


Figure 18.1 Constructive interference. Two positive pulses travel on a stretched string in opposite directions and overlap.

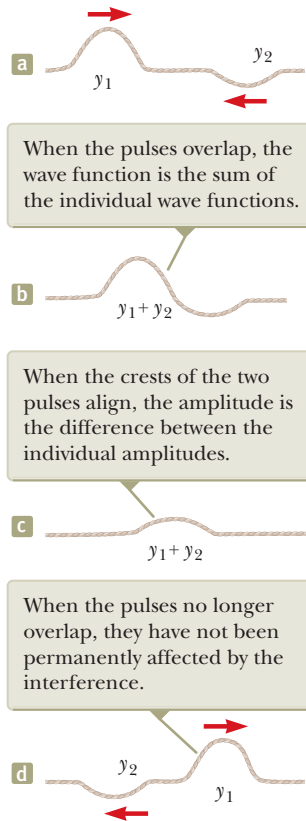


Figure 18.2 Destructive interference. Two pulses, one positive and one negative, travel on a stretched string in opposite directions and overlap.

- Quick Quiz 18.1** Two pulses move in opposite directions on a string and are identical in shape except that one has positive displacements of the elements of the string and the other has negative displacements. At the moment the two pulses completely overlap on the string, what happens? (a) The energy associated with the pulses has disappeared. (b) The string is not moving. (c) The string forms a straight line. (d) The pulses have vanished and will not reappear.

Superposition of Sinusoidal Waves

Let us now apply the principle of superposition to two sinusoidal waves traveling in the same direction in a linear medium. If the two waves are traveling to the right and have the same frequency, wavelength, and amplitude but differ in phase, we can express their individual wave functions as

$$y_1 = A \sin(kx - \omega t) \quad y_2 = A \sin(kx - \omega t + \phi)$$

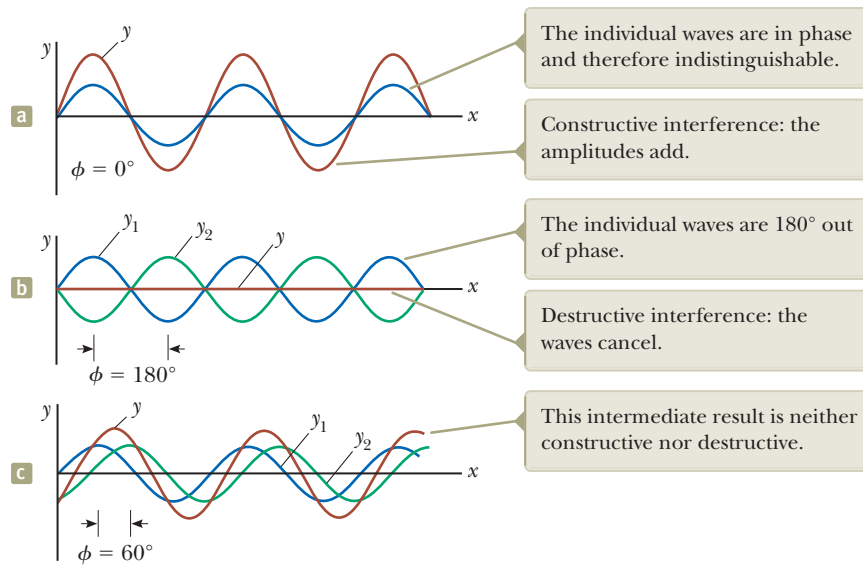
where, as usual, $k = 2\pi/\lambda$, $\omega = 2\pi f$, and ϕ is the phase constant as discussed in Section 16.2. Hence, the resultant wave function y is

$$y = y_1 + y_2 = A [\sin(kx - \omega t) + \sin(kx - \omega t + \phi)]$$

To simplify this expression, we use the trigonometric identity

$$\sin a + \sin b = 2 \cos\left(\frac{a-b}{2}\right) \sin\left(\frac{a+b}{2}\right)$$

Figure 18.3 The superposition of two identical waves y_1 and y_2 (blue and green, respectively) to yield a resultant wave (red-brown).



Letting $a = kx - \omega t$ and $b = kx - \omega t + \phi$, we find that the resultant wave function y reduces to

$$y = 2A \cos\left(\frac{\phi}{2}\right) \sin\left(kx - \omega t + \frac{\phi}{2}\right)$$

Resultant of two traveling sinusoidal waves

This result has several important features. The resultant wave function y also is sinusoidal and has the same frequency and wavelength as the individual waves because the sine function incorporates the same values of k and ω that appear in the original wave functions. The amplitude of the resultant wave is $2A \cos(\phi/2)$, and its phase constant is $\phi/2$. If the phase constant ϕ of the original wave equals 0, then $\cos(\phi/2) = \cos 0 = 1$ and the amplitude of the resultant wave is $2A$, twice the amplitude of either individual wave. In this case, the crests of the two waves are at the same locations in space and the waves are said to be everywhere *in phase* and therefore interfere constructively. The individual waves y_1 and y_2 combine to form the red-brown curve y of amplitude $2A$ shown in Figure 18.3a. Because the individual waves are in phase, they are indistinguishable in Figure 18.3a, where they appear as a single blue curve. In general, constructive interference occurs when $\cos(\phi/2) = \pm 1$. That is true, for example, when $\phi = 0, 2\pi, 4\pi, \dots$ rad, that is, when ϕ is an *even* multiple of π .

When ϕ is equal to π rad or to any *odd* multiple of π , then $\cos(\phi/2) = \cos(\pi/2) = 0$ and the crests of one wave occur at the same positions as the troughs of the second wave (Fig. 18.3b). Therefore, as a consequence of destructive interference, the resultant wave has *zero* amplitude everywhere as shown by the straight red-brown line in Figure 18.3b. Finally, when the phase constant has an arbitrary value other than 0 or an integer multiple of π rad (Fig. 18.3c), the resultant wave has an amplitude whose value is somewhere between 0 and $2A$.

In the more general case in which the waves have the same wavelength but different amplitudes, the results are similar with the following exceptions. In the in-phase case, the amplitude of the resultant wave is not twice that of a single wave, but rather is the sum of the amplitudes of the two waves. When the waves are π rad out of phase, they do not completely cancel as in Figure 18.3b. The result is a wave whose amplitude is the difference in the amplitudes of the individual waves.

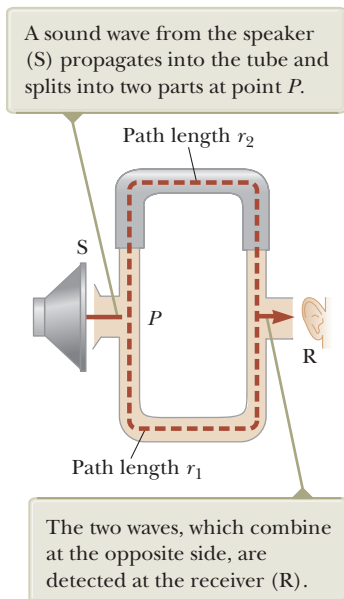


Figure 18.4 An acoustical system for demonstrating interference of sound waves. The upper path length r_2 can be varied by sliding the upper section.

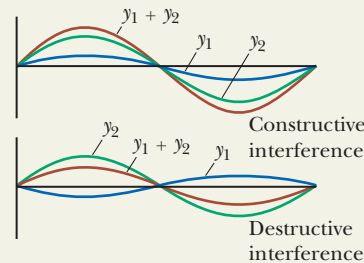
Interference of Sound Waves

One simple device for demonstrating interference of sound waves is illustrated in Figure 18.4. Sound from a loudspeaker S is sent into a tube at point P, where there is

a T-shaped junction. Half the sound energy travels in one direction, and half travels in the opposite direction. Therefore, the sound waves that reach the receiver R can travel along either of the two paths. The distance along any path from speaker to receiver is called the **path length** r . The lower path length r_1 is fixed, but the upper path length r_2 can be varied by sliding the U-shaped tube, which is similar to that on a slide trombone. When the difference in the path lengths $\Delta r = |r_2 - r_1|$ is either zero or some integer multiple of the wavelength λ (that is, $\Delta r = n\lambda$, where $n = 0, 1, 2, 3, \dots$), the two waves reaching the receiver at any instant are in phase and interfere constructively as shown in Figure 18.3a. For this case, a maximum in the sound intensity is detected at the receiver. If the path length r_2 is adjusted such that the path difference $\Delta r = \lambda/2, 3\lambda/2, \dots, n\lambda/2$ (for n odd), the two waves are exactly π rad, or 180° , out of phase at the receiver and hence cancel each other. In this case of destructive interference, no sound is detected at the receiver. This simple experiment demonstrates that a phase difference may arise between two waves generated by the same source when they travel along paths of unequal lengths. This important phenomenon will be indispensable in our investigation of the interference of light waves in Chapter 37.

Analysis Model Waves in Interference

Imagine two waves traveling in the same location through a medium. The displacement of elements of the medium is affected by both waves. According to the **principle of superposition**, the displacement is the sum of the individual displacements that would be caused by each wave. When the waves are in phase, **constructive interference** occurs and the resultant displacement is larger than the individual displacements. **Destructive interference** occurs when the waves are out of phase.



Examples:

- a piano tuner listens to a piano string and a tuning fork vibrating together and notices beats (Section 18.7)
- light waves from two coherent sources combine to form an interference pattern on a screen (Chapter 37)
- a thin film of oil on top of water shows swirls of color (Chapter 37)
- x-rays passing through a crystalline solid combine to form a Laue pattern (Chapter 38)

Example 18.1 Two Speakers Driven by the Same Source AM

Two identical loudspeakers placed 3.00 m apart are driven by the same oscillator (Fig. 18.5). A listener is originally at point O , located 8.00 m from the center of the line connecting the two speakers. The listener then moves to point P , which is a perpendicular distance 0.350 m from O , and she experiences the *first minimum* in sound intensity. What is the frequency of the oscillator?

SOLUTION

Conceptualize In Figure 18.4, a sound wave enters a tube and is then *acoustically* split into two different paths before recombining at the other end. In this example, a signal representing the sound is *electrically* split and sent to two different loudspeakers. After leaving the speakers, the sound waves recombine at the position of the listener. Despite the difference in how the splitting occurs, the path difference discussion related to Figure 18.4 can be applied here.

Categorize Because the sound waves from two separate sources combine, we apply the *waves in interference* analysis model.

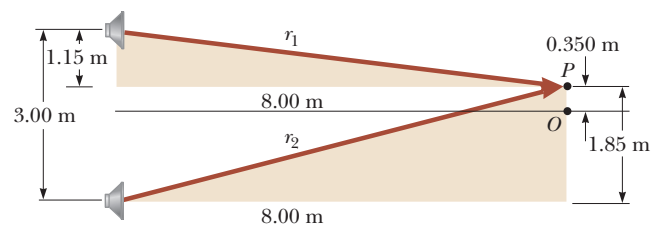


Figure 18.5 (Example 18.1) Two identical loudspeakers emit sound waves to a listener at P .

continued

18.1 continued

Analyze Figure 18.5 shows the physical arrangement of the speakers, along with two shaded right triangles that can be drawn on the basis of the lengths described in the problem. The first minimum occurs when the two waves reaching the listener at point P are 180° out of phase, in other words, when their path difference Δr equals $\lambda/2$.

From the shaded triangles, find the path lengths from the speakers to the listener:

$$r_1 = \sqrt{(8.00 \text{ m})^2 + (1.15 \text{ m})^2} = 8.08 \text{ m}$$

$$r_2 = \sqrt{(8.00 \text{ m})^2 + (1.85 \text{ m})^2} = 8.21 \text{ m}$$

Hence, the path difference is $r_2 - r_1 = 0.13 \text{ m}$. Because this path difference must equal $\lambda/2$ for the first minimum, $\lambda = 0.26 \text{ m}$.

To obtain the oscillator frequency, use Equation 16.12, $v = \lambda f$, where v is the speed of sound in air, 343 m/s :

$$f = \frac{v}{\lambda} = \frac{343 \text{ m/s}}{0.26 \text{ m}} = 1.3 \text{ kHz}$$

Finalize This example enables us to understand why the speaker wires in a stereo system should be connected properly. When connected the wrong way—that is, when the positive (or red) wire is connected to the negative (or black) terminal on one of the speakers and the other is correctly wired—the speakers are said to be “out of phase,” with one speaker moving outward while the other moves inward. As a consequence, the sound wave com-

ing from one speaker destructively interferes with the wave coming from the other at point O in Figure 18.5. A rarefaction region due to one speaker is superposed on a compression region from the other speaker. Although the two sounds probably do not completely cancel each other (because the left and right stereo signals are usually not identical), a substantial loss of sound quality occurs at point O .

WHAT IF? What if the speakers were connected out of phase? What happens at point P in Figure 18.5?

Answer In this situation, the path difference of $\lambda/2$ combines with a phase difference of $\lambda/2$ due to the incorrect wiring to give a full phase difference of λ . As a result, the waves are in phase and there is a *maximum* intensity at point P .



Figure 18.6 Two identical loudspeakers emit sound waves toward each other. When they overlap, identical waves traveling in opposite directions will combine to form standing waves.

18.2 Standing Waves

The sound waves from the pair of loudspeakers in Example 18.1 leave the speakers in the forward direction, and we considered interference at a point in front of the speakers. Suppose we turn the speakers so that they face each other and then have them emit sound of the same frequency and amplitude. In this situation, two identical waves travel in opposite directions in the same medium as in Figure 18.6. These waves combine in accordance with the waves in interference model.

We can analyze such a situation by considering wave functions for two transverse sinusoidal waves having the same amplitude, frequency, and wavelength but traveling in opposite directions in the same medium:

$$y_1 = A \sin(kx - \omega t) \quad y_2 = A \sin(kx + \omega t)$$

where y_1 represents a wave traveling in the positive x direction and y_2 represents one traveling in the negative x direction. Adding these two functions gives the resultant wave function y :

$$y = y_1 + y_2 = A \sin(kx - \omega t) + A \sin(kx + \omega t)$$

When we use the trigonometric identity $\sin(a \pm b) = \sin a \cos b \pm \cos a \sin b$, this expression reduces to

$$y = (2A \sin kx) \cos \omega t \quad (18.1)$$

Equation 18.1 represents the wave function of a **standing wave**. A standing wave such as the one on a string shown in Figure 18.7 is an oscillation pattern *with a stationary outline* that results from the superposition of two identical waves traveling in opposite directions.

The amplitude of the vertical oscillation of any element of the string depends on the horizontal position of the element. Each element vibrates within the confines of the envelope function $2A \sin kx$.

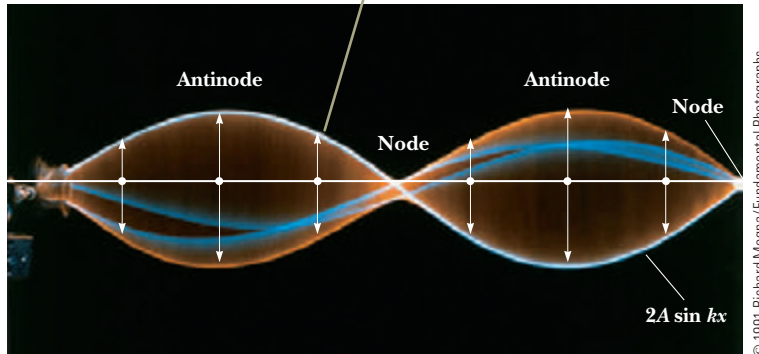


Figure 18.7 Multiflash photograph of a standing wave on a string. The time behavior of the vertical displacement from equilibrium of an individual element of the string is given by $\cos \omega t$. That is, each element vibrates at an angular frequency ω .

Notice that Equation 18.1 does not contain a function of $kx - \omega t$. Therefore, it is not an expression for a single traveling wave. When you observe a standing wave, there is no sense of motion in the direction of propagation of either original wave. Comparing Equation 18.1 with Equation 15.6, we see that it describes a special kind of simple harmonic motion. Every element of the medium oscillates in simple harmonic motion with the same angular frequency ω (according to the $\cos \omega t$ factor in the equation). The amplitude of the simple harmonic motion of a given element (given by the factor $2A \sin kx$, the coefficient of the cosine function) depends on the location x of the element in the medium, however.

If you can find a noncordless telephone with a coiled cord connecting the handset to the base unit, you can see the difference between a standing wave and a traveling wave. Stretch the coiled cord out and flick it with a finger. You will see a pulse traveling along the cord. Now shake the handset up and down and adjust your shaking frequency until every coil on the cord is moving up at the same time and then down. That is a standing wave, formed from the combination of waves moving away from your hand and reflected from the base unit toward your hand. Notice that there is no sense of traveling along the cord like there was for the pulse. You only see up-and-down motion of the elements of the cord.

Equation 18.1 shows that the amplitude of the simple harmonic motion of an element of the medium has a minimum value of zero when x satisfies the condition $\sin kx = 0$, that is, when

$$kx = 0, \pi, 2\pi, 3\pi, \dots$$

Because $k = 2\pi/\lambda$, these values for kx give

$$x = 0, \frac{\lambda}{2}, \lambda, \frac{3\lambda}{2}, \dots = \frac{n\lambda}{2} \quad n = 0, 1, 2, 3, \dots \quad (18.2)$$

These points of zero amplitude are called **nodes**.

The element of the medium with the *greatest* possible displacement from equilibrium has an amplitude of $2A$, which we define as the amplitude of the standing wave. The positions in the medium at which this maximum displacement occurs are called **antinodes**. The antinodes are located at positions for which the coordinate x satisfies the condition $\sin kx = \pm 1$, that is, when

$$kx = \frac{\pi}{2}, \frac{3\pi}{2}, \frac{5\pi}{2}, \dots$$

Therefore, the positions of the antinodes are given by

$$x = \frac{\lambda}{4}, \frac{3\lambda}{4}, \frac{5\lambda}{4}, \dots = \frac{n\lambda}{4} \quad n = 1, 3, 5, \dots \quad (18.3)$$

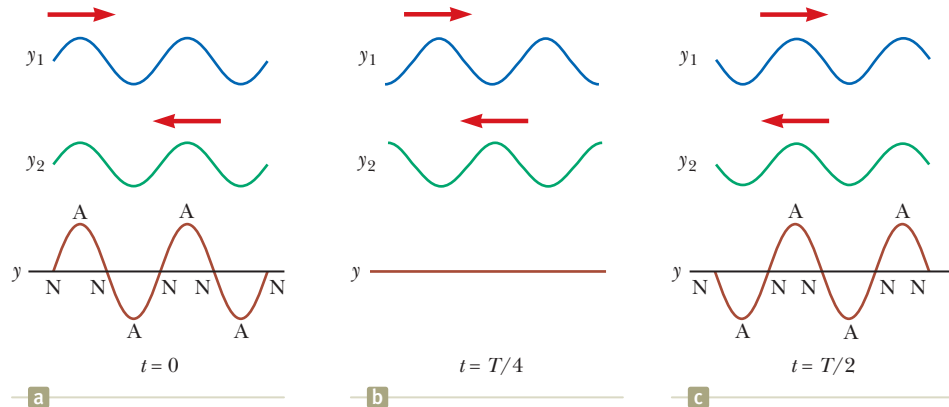
Pitfall Prevention 18.2

Three Types of Amplitude We need to distinguish carefully between the **amplitude of the individual waves**, which is A , and the **amplitude of the simple harmonic motion of the elements of the medium**, which is $2A \sin kx$. A given element in a standing wave vibrates within the constraints of the *envelope* function $2A \sin kx$, where x is that element's position in the medium. Such vibration is in contrast to traveling sinusoidal waves, in which all elements oscillate with the same amplitude and the same frequency and the amplitude A of the wave is the same as the amplitude A of the simple harmonic motion of the elements. Furthermore, we can identify the **amplitude of the standing wave** as $2A$.

◀ Positions of nodes

◀ Positions of antinodes

Figure 18.8 Standing-wave patterns produced at various times by two waves of equal amplitude traveling in opposite directions. For the resultant wave y , the nodes (N) are points of zero displacement and the antinodes (A) are points of maximum displacement.



Two nodes and two antinodes are labeled in the standing wave in Figure 18.7. The light blue curve labeled $2A \sin kx$ in Figure 18.7 represents one wavelength of the traveling waves that combine to form the standing wave. Figure 18.7 and Equations 18.2 and 18.3 provide the following important features of the locations of nodes and antinodes:

- The distance between adjacent antinodes is equal to $\lambda/2$.
- The distance between adjacent nodes is equal to $\lambda/2$.
- The distance between a node and an adjacent antinode is $\lambda/4$.

Wave patterns of the elements of the medium produced at various times by two transverse traveling waves moving in opposite directions are shown in Figure 18.8. The blue and green curves are the wave patterns for the individual traveling waves, and the red-brown curves are the wave patterns for the resultant standing wave. At $t = 0$ (Fig. 18.8a), the two traveling waves are in phase, giving a wave pattern in which each element of the medium is at rest and experiencing its maximum displacement from equilibrium. One-quarter of a period later, at $t = T/4$ (Fig. 18.8b), the traveling waves have moved one-fourth of a wavelength (one to the right and the other to the left). At this time, the traveling waves are out of phase, and each element of the medium is passing through the equilibrium position in its simple harmonic motion. The result is zero displacement for elements at all values of x ; that is, the wave pattern is a straight line. At $t = T/2$ (Fig. 18.8c), the traveling waves are again in phase, producing a wave pattern that is inverted relative to the $t = 0$ pattern. In the standing wave, the elements of the medium alternate in time between the extremes shown in Figures 18.8a and 18.8c.

- Quick Quiz 18.2** Consider the waves in Figure 18.8 to be waves on a stretched string. Define the velocity of elements of the string as positive if they are moving upward in the figure. (i) At the moment the string has the shape shown by the red-brown curve in Figure 18.8a, what is the instantaneous velocity of elements along the string? (a) zero for all elements (b) positive for all elements (c) negative for all elements (d) varies with the position of the element (ii) From the same choices, at the moment the string has the shape shown by the red-brown curve in Figure 18.8b, what is the instantaneous velocity of elements along the string?

Example 18.2 Formation of a Standing Wave

Two waves traveling in opposite directions produce a standing wave. The individual wave functions are

$$y_1 = 4.0 \sin(3.0x - 2.0t)$$

$$y_2 = 4.0 \sin(3.0x + 2.0t)$$

where x and y are measured in centimeters and t is in seconds.

- (A)** Find the amplitude of the simple harmonic motion of the element of the medium located at $x = 2.3$ cm.

► 18.2 continued

SOLUTION

Conceptualize The waves described by the given equations are identical except for their directions of travel, so they indeed combine to form a standing wave as discussed in this section. We can represent the waves graphically by the blue and green curves in Figure 18.8.

Categorize We will substitute values into equations developed in this section, so we categorize this example as a substitution problem.

From the equations for the waves, we see that $A = 4.0$ cm, $k = 3.0$ rad/cm, and $\omega = 2.0$ rad/s. Use Equation 18.1 to write an expression for the standing wave:

$$y = (2A \sin kx) \cos \omega t = 8.0 \sin 3.0x \cos 2.0t$$

Find the amplitude of the simple harmonic motion of the element at the position $x = 2.3$ cm by evaluating the sine function at this position:

$$\begin{aligned} y_{\max} &= (8.0 \text{ cm}) \sin 3.0x \Big|_{x=2.3} \\ &= (8.0 \text{ cm}) \sin (6.9 \text{ rad}) = 4.6 \text{ cm} \end{aligned}$$

(B) Find the positions of the nodes and antinodes if one end of the string is at $x = 0$.

SOLUTION

Find the wavelength of the traveling waves:

$$k = \frac{2\pi}{\lambda} = 3.0 \text{ rad/cm} \rightarrow \lambda = \frac{2\pi}{3.0} \text{ cm}$$

Use Equation 18.2 to find the locations of the nodes:

$$x = n \frac{\lambda}{2} = n \left(\frac{\pi}{3.0} \right) \text{ cm} \quad n = 0, 1, 2, 3, \dots$$

Use Equation 18.3 to find the locations of the antinodes:

$$x = n \frac{\lambda}{4} = n \left(\frac{\pi}{6.0} \right) \text{ cm} \quad n = 1, 3, 5, 7, \dots$$

18.3 Analysis Model: Waves Under Boundary Conditions

Consider a string of length L fixed at both ends as shown in Figure 18.9. We will use this system as a model for a guitar string or piano string. Waves can travel in both directions on the string. Therefore, standing waves can be set up in the string by a continuous superposition of waves incident on and reflected from the ends. Notice that there is a *boundary condition* for the waves on the string: because the ends of the string are fixed, they must necessarily have zero displacement and are therefore nodes by definition. The condition that both ends of the string must be nodes fixes the wavelength of the standing wave on the string according to Equation 18.2, which, in turn, determines the frequency of the wave. The boundary condition results in the string having a number of discrete natural patterns of oscillation, called **normal modes**, each of which has a characteristic frequency that is easily calculated. This situation in which only certain frequencies of oscillation are allowed is called **quantization**. Quantization is a common occurrence when waves are subject to boundary conditions and is a central feature in our discussions of quantum physics in the extended version of this text. Notice in Figure 18.8 that there are no boundary conditions, so standing waves of *any* frequency can be established; there is no quantization without boundary conditions. Because boundary conditions occur so often for waves, we identify an analysis model called **waves under boundary conditions** for the discussion that follows.

The normal modes of oscillation for the string in Figure 18.9 can be described by imposing the boundary conditions that the ends be nodes and that the nodes be separated by one-half of a wavelength with antinodes halfway between the nodes. The first normal mode that is consistent with these requirements, shown in Figure 18.10a (page 542), has nodes at its ends and one antinode in the middle. This normal

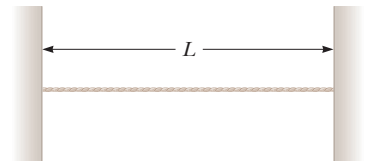


Figure 18.9 A string of length L fixed at both ends.

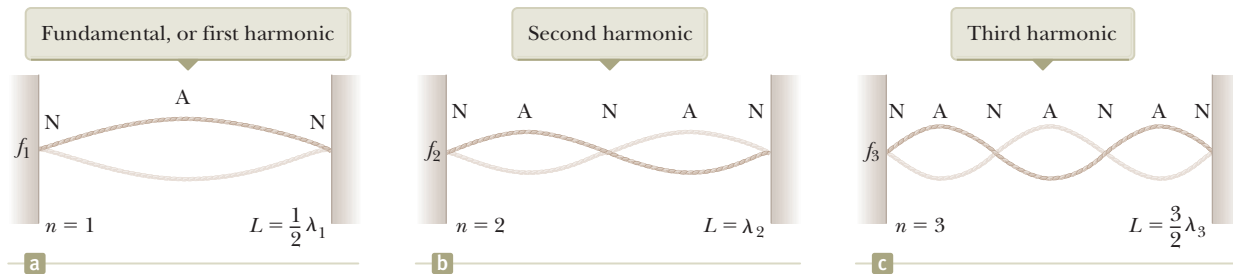


Figure 18.10 The normal modes of vibration of the string in Figure 18.9 form a harmonic series. The string vibrates between the extremes shown.

mode is the longest-wavelength mode that is consistent with our boundary conditions. The first normal mode occurs when the wavelength λ_1 is equal to twice the length of the string, or $\lambda_1 = 2L$. The section of a standing wave from one node to the next node is called a *loop*. In the first normal mode, the string is vibrating in one loop. In the second normal mode (see Fig. 18.10b), the string vibrates in two loops. When the left half of the string is moving upward, the right half is moving downward. In this case, the wavelength λ_2 is equal to the length of the string, as expressed by $\lambda_2 = L$. The third normal mode (see Fig. 18.10c) corresponds to the case in which $\lambda_3 = 2L/3$, and the string vibrates in three loops. In general, the wavelengths of the various normal modes for a string of length L fixed at both ends are

Wavelengths of normal modes

$$\lambda_n = \frac{2L}{n} \quad n = 1, 2, 3, \dots \quad (18.4)$$

where the index n refers to the n th normal mode of oscillation. These modes are *possible*. The *actual* modes that are excited on a string are discussed shortly.

The natural frequencies associated with the modes of oscillation are obtained from the relationship $f = v/\lambda$, where the wave speed v is the same for all frequencies. Using Equation 18.4, we find that the natural frequencies f_n of the normal modes are

Natural frequencies of normal modes as functions of wave speed and length of string

$$f_n = \frac{v}{\lambda_n} = n \frac{v}{2L} \quad n = 1, 2, 3, \dots \quad (18.5)$$

These natural frequencies are also called the *quantized frequencies* associated with the vibrating string fixed at both ends.

Because $v = \sqrt{T/\mu}$ (see Eq. 16.18) for waves on a string, where T is the tension in the string and μ is its linear mass density, we can also express the natural frequencies of a taut string as

Natural frequencies of normal modes as functions of string tension and linear mass density

$$f_n = \frac{n}{2L} \sqrt{\frac{T}{\mu}} \quad n = 1, 2, 3, \dots \quad (18.6)$$

The lowest frequency f_1 , which corresponds to $n = 1$, is called either the **fundamental** or the **fundamental frequency** and is given by

Fundamental frequency of a taut string

$$f_1 = \frac{1}{2L} \sqrt{\frac{T}{\mu}} \quad (18.7)$$

The frequencies of the remaining normal modes are integer multiples of the fundamental frequency (Eq. 18.5). Frequencies of normal modes that exhibit such an integer-multiple relationship form a **harmonic series**, and the normal modes are called **harmonics**. The fundamental frequency f_1 is the frequency of the first harmonic, the frequency $f_2 = 2f_1$ is that of the second harmonic, and the frequency $f_n = nf_1$ is that of the n th harmonic. Other oscillating systems, such as a drumhead, exhibit normal modes, but the frequencies are not related as integer multiples of a fundamental (see Section 18.6). Therefore, we do not use the term *harmonic* in association with those types of systems.

Let us examine further how the various harmonics are created in a string. To excite only a single harmonic, the string would have to be distorted into a shape that corresponds to that of the desired harmonic. After being released, the string would vibrate at the frequency of that harmonic. This maneuver is difficult to perform, however, and is not how a string of a musical instrument is excited. If the string is distorted into a general, nonsinusoidal shape, the resulting vibration includes a combination of various harmonics. Such a distortion occurs in musical instruments when the string is plucked (as in a guitar), bowed (as in a cello), or struck (as in a piano). When the string is distorted into a nonsinusoidal shape, only waves that satisfy the boundary conditions can persist on the string. These waves are the harmonics.

The frequency of a string that defines the musical note that it plays is that of the fundamental, even though other harmonics are present. The string's frequency can be varied by changing the string's tension or its length. For example, the tension in guitar and violin strings is varied by a screw adjustment mechanism or by tuning pegs located on the neck of the instrument. As the tension is increased, the frequency of the normal modes increases in accordance with Equation 18.6. Once the instrument is "tuned," players vary the frequency by moving their fingers along the neck, thereby changing the length of the oscillating portion of the string. As the length is shortened, the frequency increases because, as Equation 18.6 specifies, the normal-mode frequencies are inversely proportional to string length.

- Quick Quiz 18.3** When a standing wave is set up on a string fixed at both ends, which of the following statements is true? (a) The number of nodes is equal to the number of antinodes. (b) The wavelength is equal to the length of the string divided by an integer. (c) The frequency is equal to the number of nodes times the fundamental frequency. (d) The shape of the string at any instant shows a symmetry about the midpoint of the string.

Analysis Model Waves Under Boundary Conditions

Imagine a wave that is not free to travel throughout all space as in the traveling wave model. If the wave is subject to boundary conditions, such that certain requirements must be met at specific locations in space, the wave is limited to a set of **normal modes** with quantized wavelengths and quantized natural frequencies.

For waves on a string fixed at both ends, the natural frequencies are

$$f_n = \frac{v}{2L} n \quad n = 1, 2, 3, \dots \quad (18.6)$$

where v is the tension in the string and μ is its linear mass density.



Examples:

- waves traveling back and forth on a guitar string combine to form a standing wave
- sound waves traveling back and forth in a clarinet combine to form standing waves (Section 18.5)
- a microscopic particle confined to a small region of space is modeled as a wave and exhibits quantized energies (Chapter 41)
- the Fermi energy of metal is determined by modeling electrons as wave-like particles in a box (Chapter 43)

Example 18.3 Give Me a C Note!

The middle C string on a piano has a fundamental frequency of 262 Hz, and the string for the first A above middle C has a fundamental frequency of 440 Hz.

Calculate the frequencies of the next two harmonics of the C string.

continued

▶ 18.3 continued

SOLUTION

Conceptualize Remember that the harmonics of a vibrating string have frequencies that are related by integer multiples of the fundamental.

Categorize This first part of the example is a simple substitution problem.

Knowing that the fundamental frequency is $f_1 = 262$ Hz, find the frequencies of the next harmonics by multiplying by integers:

$$f_2 = 2f_1 = 524 \text{ Hz}$$

$$f_3 = 3f_1 = 786 \text{ Hz}$$

(B) If the A and C strings have the same linear mass density μ and length L , determine the ratio of tensions in the two strings.

SOLUTION

Categorize This part of the example is more of an analysis problem than is part (A) and uses the *waves under boundary conditions* model.

Analyze Use Equation 18.7 to write expressions for the fundamental frequencies of the two strings:

$$f_{1A} = \frac{1}{2L} \sqrt{\frac{T_A}{\mu}} \quad \text{and} \quad f_{1C} = \frac{1}{2L} \sqrt{\frac{T_C}{\mu}}$$

Divide the first equation by the second and solve for the ratio of tensions:

$$\frac{f_{1A}}{f_{1C}} = \sqrt{\frac{T_A}{T_C}} \rightarrow \frac{T_A}{T_C} = \left(\frac{f_{1A}}{f_{1C}}\right)^2 = \left(\frac{440}{262}\right)^2 = 2.82$$

Finalize If the frequencies of piano strings were determined solely by tension, this result suggests that the ratio of tensions from the lowest string to the highest string on the piano would be enormous. Such large tensions would make it difficult to design a frame to support the strings. In reality, the frequencies of piano strings vary due to additional parameters, including the mass per unit length and the length of the string. The What If? below explores a variation in length.

WHAT IF? If you look inside a real piano, you'll see that the assumption made in part (B) is only partially true. The strings are not likely to have the same length. The string densities for the given notes might be equal, but suppose the length of the A string is only 64% of the length of the C string. What is the ratio of their tensions?

Answer Using Equation 18.7 again, we set up the ratio of frequencies:

$$\frac{f_{1A}}{f_{1C}} = \frac{L_C}{L_A} \sqrt{\frac{T_A}{T_C}} \rightarrow \frac{T_A}{T_C} = \left(\frac{L_A}{L_C}\right)^2 \left(\frac{f_{1A}}{f_{1C}}\right)^2$$

$$\frac{T_A}{T_C} = (0.64)^2 \left(\frac{440}{262}\right)^2 = 1.16$$

Notice that this result represents only a 16% increase in tension, compared with the 182% increase in part (B).

Example 18.4 Changing String Vibration with Water AM

One end of a horizontal string is attached to a vibrating blade, and the other end passes over a pulley as in Figure 18.11a. A sphere of mass 2.00 kg hangs on the end of the string. The string is vibrating in its second harmonic. A container of water is raised under the sphere so that the sphere is completely submerged. In this configuration, the string vibrates in its fifth harmonic as shown in Figure 18.11b. What is the radius of the sphere?

SOLUTION

Conceptualize Imagine what happens when the sphere is immersed in the water. The buoyant force acts upward on the sphere, reducing the tension in the string. The change in tension causes a change in the speed of waves on the

18.4 continued

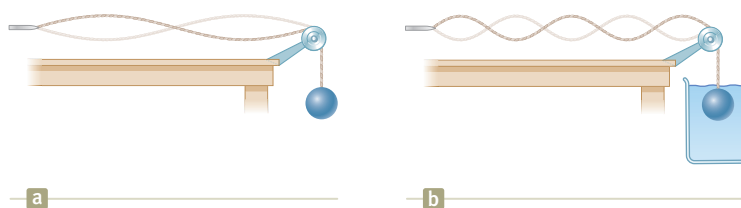


Figure 18.11 (Example 18.4) (a) When the sphere hangs in air, the string vibrates in its second harmonic. (b) When the sphere is immersed in water, the string vibrates in its fifth harmonic.

string, which in turn causes a change in the wavelength. This altered wavelength results in the string vibrating in its fifth normal mode rather than the second.

Categorize The hanging sphere is modeled as a *particle in equilibrium*. One of the forces acting on it is the buoyant force from the water. We also apply the *waves under boundary conditions* model to the string.

Analyze Apply the particle in equilibrium model to the sphere in Figure 18.11a, identifying T_1 as the tension in the string as the sphere hangs in air:

$$\sum F = T_1 - mg = 0$$

$$T_1 = mg$$

Apply the particle in equilibrium model to the sphere in Figure 18.11b, where T_2 is the tension in the string as the sphere is immersed in water:

$$T_2 + B - mg = 0$$

$$(1) \quad B = mg - T_2$$

The desired quantity, the radius of the sphere, will appear in the expression for the buoyant force B . Before proceeding in this direction, however, we must evaluate T_2 from the information about the standing wave.

Write the equation for the frequency of a standing wave on a string (Eq. 18.6) twice, once before the sphere is immersed and once after. Notice that the frequency f is the same in both cases because it is determined by the vibrating blade. In addition, the linear mass density μ and the length L of the vibrating portion of the string are the same in both cases. Divide the equations:

$$f = \frac{n_1}{2L} \sqrt{\frac{T_1}{\mu}} \quad \rightarrow \quad 1 = \frac{n_1}{n_2} \sqrt{\frac{T_1}{T_2}}$$

$$f = \frac{n_2}{2L} \sqrt{\frac{T_2}{\mu}}$$

Solve for T_2 :

$$T_2 = \left(\frac{n_1}{n_2}\right)^2 T_1 = \left(\frac{n_1}{n_2}\right)^2 mg$$

Substitute this result into Equation (1):

$$(2) \quad B = mg - \left(\frac{n_1}{n_2}\right)^2 mg = mg \left[1 - \left(\frac{n_1}{n_2}\right)^2\right]$$

Using Equation 14.5, express the buoyant force in terms of the radius of the sphere:

$$B = \rho_{\text{water}} g V_{\text{sphere}} = \rho_{\text{water}} g \left(\frac{4}{3} \pi r^3\right)$$

Solve for the radius of the sphere and substitute from Equation (2):

$$r = \left(\frac{3B}{4\pi\rho_{\text{water}}g}\right)^{1/3} = \left\{\frac{3m}{4\pi\rho_{\text{water}}}\left[1 - \left(\frac{n_1}{n_2}\right)^2\right]\right\}^{1/3}$$

Substitute numerical values:

$$r = \left\{\frac{3(2.00 \text{ kg})}{4\pi(1000 \text{ kg/m}^3)}\left[1 - \left(\frac{2}{5}\right)^2\right]\right\}^{1/3}$$

$$= 0.0737 \text{ m} = \boxed{7.37 \text{ cm}}$$

Finalize Notice that only certain radii of the sphere will result in the string vibrating in a normal mode; the speed of waves on the string must be changed to a value such that the length of the string is an integer multiple of half wavelengths. This limitation is a feature of the *quantization* that was introduced earlier in this chapter: the sphere radii that cause the string to vibrate in a normal mode are *quantized*.




Figure 18.12 Standing waves are set up in a string when one end is connected to a vibrating blade.

18.4 Resonance

We have seen that a system such as a taut string is capable of oscillating in one or more normal modes of oscillation. Suppose we drive such a string with a vibrating blade as in Figure 18.12. We find that if a periodic force is applied to such a system, the amplitude of the resulting motion of the string is greatest when the frequency of the applied force is equal to one of the natural frequencies of the system. This phenomenon, known as *resonance*, was discussed in Section 15.7 with regard to a simple harmonic oscillator. Although a block–spring system or a simple pendulum has only one natural frequency, standing-wave systems have a whole set of natural frequencies, such as that given by Equation 18.6 for a string. Because an oscillating system exhibits a large amplitude when driven at any of its natural frequencies, these frequencies are often referred to as **resonance frequencies**.

Consider the string in Figure 18.12 again. The fixed end is a node, and the end connected to the blade is very nearly a node because the amplitude of the blade's motion is small compared with that of the elements of the string. As the blade oscillates, transverse waves sent down the string are reflected from the fixed end. As we learned in Section 18.3, the string has natural frequencies that are determined by its length, tension, and linear mass density (see Eq. 18.6). When the frequency of the blade equals one of the natural frequencies of the string, standing waves are produced and the string oscillates with a large amplitude. In this resonance case, the wave generated by the oscillating blade is in phase with the reflected wave and the string absorbs energy from the blade. If the string is driven at a frequency that is not one of its natural frequencies, the oscillations are of low amplitude and exhibit no stable pattern.

Resonance is very important in the excitation of musical instruments based on air columns. We shall discuss this application of resonance in Section 18.5.

18.5 Standing Waves in Air Columns

The waves under boundary conditions model can also be applied to sound waves in a column of air such as that inside an organ pipe or a clarinet. Standing waves in this case are the result of interference between longitudinal sound waves traveling in opposite directions.

In a pipe closed at one end, the closed end is a **displacement node** because the rigid barrier at this end does not allow longitudinal motion of the air. Because the pressure wave is 90° out of phase with the displacement wave (see Section 17.1), the closed end of an air column corresponds to a **pressure antinode** (that is, a point of maximum pressure variation).

The open end of an air column is approximately a **displacement antinode**¹ and a pressure node. We can understand why no pressure variation occurs at an open end by noting that the end of the air column is open to the atmosphere; therefore, the pressure at this end must remain constant at atmospheric pressure.

You may wonder how a sound wave can reflect from an open end because there may not appear to be a change in the medium at this point: the medium through which the sound wave moves is air both inside and outside the pipe. Sound can be represented as a pressure wave, however, and a compression region of the sound wave is constrained by the sides of the pipe as long as the region is inside the pipe. As the compression region exits at the open end of the pipe, the constraint of the pipe is removed and the compressed air is free to expand into the atmosphere. Therefore, there is a change in the *character* of the medium between the inside

¹Strictly speaking, the open end of an air column is not exactly a displacement antinode. A compression reaching an open end does not reflect until it passes beyond the end. For a tube of circular cross section, an end correction equal to approximately $0.6R$, where R is the tube's radius, must be added to the length of the air column. Hence, the effective length of the air column is longer than the true length L . We ignore this end correction in this discussion.

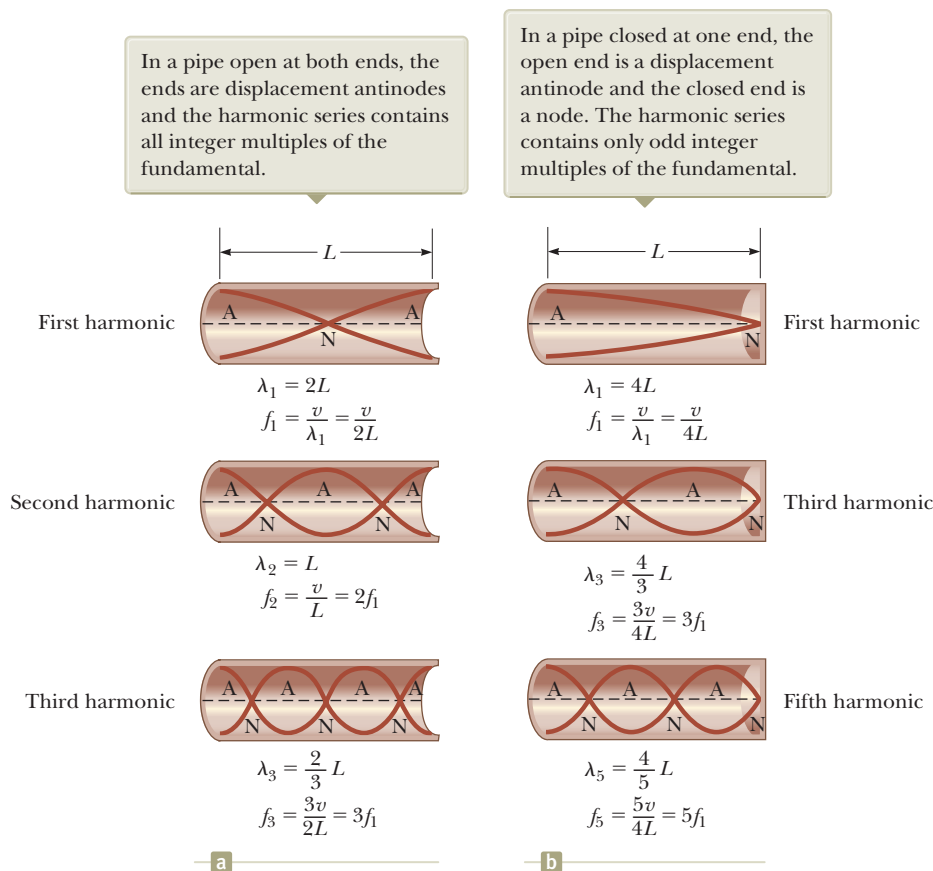


Figure 18.13 Graphical representations of the motion of elements of air in standing longitudinal waves in (a) a column open at both ends and (b) a column closed at one end.

of the pipe and the outside even though there is no change in the *material* of the medium. This change in character is sufficient to allow some reflection.

With the boundary conditions of nodes or antinodes at the ends of the air column, we have a set of normal modes of oscillation as is the case for the string fixed at both ends. Therefore, the air column has quantized frequencies.

The first three normal modes of oscillation of a pipe open at both ends are shown in Figure 18.13a. Notice that both ends are displacement antinodes (approximately). In the first normal mode, the standing wave extends between two adjacent antinodes, which is a distance of half a wavelength. Therefore, the wavelength is twice the length of the pipe, and the fundamental frequency is $f_1 = v/2L$. As Figure 18.13a shows, the frequencies of the higher harmonics are $2f_1, 3f_1, \dots$

In a pipe open at both ends, the natural frequencies of oscillation form a harmonic series that includes all integral multiples of the fundamental frequency.

Because all harmonics are present and because the fundamental frequency is given by the same expression as that for a string (see Eq. 18.5), we can express the natural frequencies of oscillation as

$$f_n = n \frac{v}{2L} \quad n = 1, 2, 3, \dots \quad (18.8)$$

Despite the similarity between Equations 18.5 and 18.8, you must remember that v in Equation 18.5 is the speed of waves on the string, whereas v in Equation 18.8 is the speed of sound in air.

If a pipe is closed at one end and open at the other, the closed end is a displacement node (see Fig. 18.13b). In this case, the standing wave for the fundamental mode extends from an antinode to the adjacent node, which is one-fourth of a wavelength. Hence, the wavelength for the first normal mode is $4L$, and the fundamental

Pitfall Prevention 18.3

Sound Waves in Air Are Longitudinal, Not Transverse The standing longitudinal waves are drawn as transverse waves in Figure 18.13. Because they are in the same direction as the propagation, it is difficult to draw longitudinal displacements. Therefore, it is best to interpret the red-brown curves in Figure 18.13 as a graphical representation of the waves (our diagrams of string waves are pictorial representations), with the vertical axis representing the horizontal displacement $s(x, t)$ of the elements of the medium.

Natural frequencies of a pipe open at both ends

frequency is $f_1 = v/4L$. As Figure 18.13b shows, the higher-frequency waves that satisfy our conditions are those that have a node at the closed end and an antinode at the open end; hence, the higher harmonics have frequencies $3f_1, 5f_1, \dots$

In a pipe closed at one end, the natural frequencies of oscillation form a harmonic series that includes only odd integral multiples of the fundamental frequency.

We express this result mathematically as

$$f_n = n \frac{v}{4L} \quad n = 1, 3, 5, \dots \quad (18.9)$$

Natural frequencies of
a pipe closed at one end
and open at the other

It is interesting to investigate what happens to the frequencies of instruments based on air columns and strings during a concert as the temperature rises. The sound emitted by a flute, for example, becomes sharp (increases in frequency) as the flute warms up because the speed of sound increases in the increasingly warmer air inside the flute (consider Eq. 18.8). The sound produced by a violin becomes flat (decreases in frequency) as the strings thermally expand because the expansion causes their tension to decrease (see Eq. 18.6).

Musical instruments based on air columns are generally excited by resonance. The air column is presented with a sound wave that is rich in many frequencies. The air column then responds with a large-amplitude oscillation to the frequencies that match the quantized frequencies in its set of harmonics. In many woodwind instruments, the initial rich sound is provided by a vibrating reed. In brass instruments, this excitation is provided by the sound coming from the vibration of the player's lips. In a flute, the initial excitation comes from blowing over an edge at the mouthpiece of the instrument in a manner similar to blowing across the opening of a bottle with a narrow neck. The sound of the air rushing across the bottle opening has many frequencies, including one that sets the air cavity in the bottle into resonance.

Quick Quiz 18.4 A pipe open at both ends resonates at a fundamental frequency f_{open} . When one end is covered and the pipe is again made to resonate, the fundamental frequency is f_{closed} . Which of the following expressions describes how these two resonant frequencies compare? (a) $f_{\text{closed}} = f_{\text{open}}$ (b) $f_{\text{closed}} = \frac{1}{2}f_{\text{open}}$ (c) $f_{\text{closed}} = 2f_{\text{open}}$ (d) $f_{\text{closed}} = \frac{3}{2}f_{\text{open}}$

Quick Quiz 18.5 Balboa Park in San Diego has an outdoor organ. When the air temperature increases, the fundamental frequency of one of the organ pipes

- (a) stays the same, (b) goes down, (c) goes up, or (d) is impossible to determine.

Example 18.5 Wind in a Culvert

A section of drainage culvert 1.23 m in length makes a howling noise when the wind blows across its open ends.

(A) Determine the frequencies of the first three harmonics of the culvert if it is cylindrical in shape and open at both ends. Take $v = 343$ m/s as the speed of sound in air.

SOLUTION

Conceptualize The sound of the wind blowing across the end of the pipe contains many frequencies, and the culvert responds to the sound by vibrating at the natural frequencies of the air column.

Categorize This example is a relatively simple substitution problem.

Find the frequency of the first harmonic of the culvert, modeling it as an air column open at both ends:

$$f_1 = \frac{v}{2L} = \frac{343 \text{ m/s}}{2(1.23 \text{ m})} = 139 \text{ Hz}$$

Find the next harmonics by multiplying by integers:

$$f_2 = 2f_1 = 279 \text{ Hz}$$

$$f_3 = 3f_1 = 418 \text{ Hz}$$

18.5 continued

(B) What are the three lowest natural frequencies of the culvert if it is blocked at one end?

SOLUTION

Find the frequency of the first harmonic of the culvert, modeling it as an air column closed at one end:

$$f_1 = \frac{v}{4L} = \frac{343 \text{ m/s}}{4(1.23 \text{ m})} = 69.7 \text{ Hz}$$

Find the next two harmonics by multiplying by odd integers:

$$f_3 = 3f_1 = 209 \text{ Hz}$$

$$f_5 = 5f_1 = 349 \text{ Hz}$$

Example 18.6 Measuring the Frequency of a Tuning Fork **AM**

A simple apparatus for demonstrating resonance in an air column is depicted in Figure 18.14. A vertical pipe open at both ends is partially submerged in water, and a tuning fork vibrating at an unknown frequency is placed near the top of the pipe. The length L of the air column can be adjusted by moving the pipe vertically. The sound waves generated by the fork are reinforced when L corresponds to one of the resonance frequencies of the pipe. For a certain pipe, the smallest value of L for which a peak occurs in the sound intensity is 9.00 cm.

(A) What is the frequency of the tuning fork?

SOLUTION

Conceptualize Sound waves from the tuning fork enter the pipe at its upper end. Although the pipe is open at its lower end to allow the water to enter, the water's surface acts like a barrier. The waves reflect from the water surface and combine with those moving downward to form a standing wave.

Categorize Because of the reflection of the sound waves from the water surface, we can model the pipe as open at the upper end and closed at the lower end. Therefore, we can apply the *waves under boundary conditions* model to this situation.

Analyze

Use Equation 18.9 to find the fundamental frequency for $L = 0.0900 \text{ m}$:

$$f_1 = \frac{v}{4L} = \frac{343 \text{ m/s}}{4(0.0900 \text{ m})} = 953 \text{ Hz}$$

Because the tuning fork causes the air column to resonate at this frequency, this frequency must also be that of the tuning fork.

(B) What are the values of L for the next two resonance conditions?

SOLUTION

Use Equation 16.12 to find the wavelength of the sound wave from the tuning fork:

$$\lambda = \frac{v}{f} = \frac{343 \text{ m/s}}{953 \text{ Hz}} = 0.360 \text{ m}$$

Notice from Figure 18.14b that the length of the air column for the second resonance is $3\lambda/4$:

$$L = 3\lambda/4 = 0.270 \text{ m}$$

Notice from Figure 18.14b that the length of the air column for the third resonance is $5\lambda/4$:

$$L = 5\lambda/4 = 0.450 \text{ m}$$

Finalize Consider how this problem differs from the preceding example. In the culvert, the length was fixed and the air column was presented with a mixture of many frequencies. The pipe in this example is presented with one single frequency from the tuning fork, and the length of the pipe is varied until resonance is achieved.

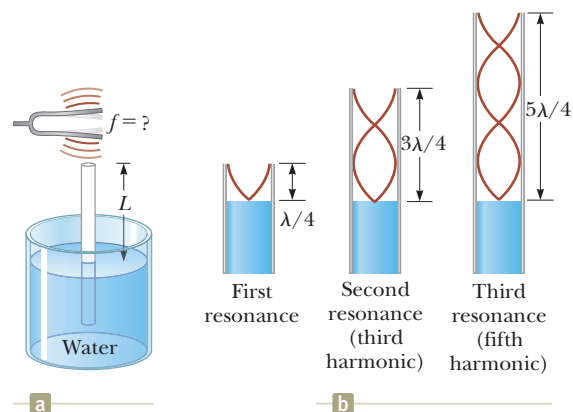


Figure 18.14 (Example 18.6) (a) Apparatus for demonstrating the resonance of sound waves in a pipe closed at one end. The length L of the air column is varied by moving the pipe vertically while it is partially submerged in water. (b) The first three normal modes of the system shown in (a).

18.6 Standing Waves in Rods and Membranes

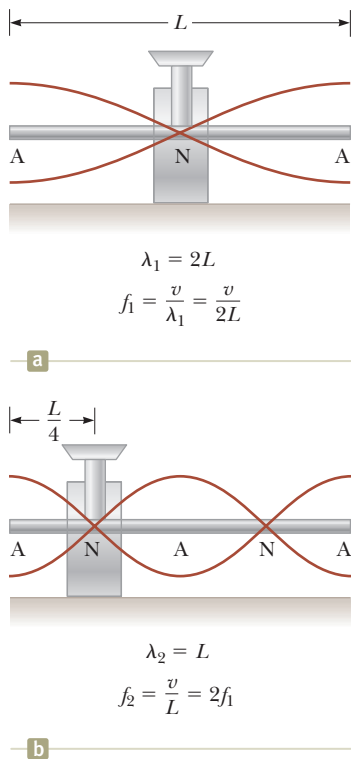


Figure 18.15 Normal-mode longitudinal vibrations of a rod of length L (a) clamped at the middle to produce the first normal mode and (b) clamped at a distance $L/4$ from one end to produce the second normal mode. Notice that the red-brown curves are graphical representations of oscillations parallel to the rod (longitudinal waves).

Standing waves can also be set up in rods and membranes. A rod clamped in the middle and stroked parallel to the rod at one end oscillates as depicted in Figure 18.15a. The oscillations of the elements of the rod are longitudinal, and so the red-brown curves in Figure 18.15 represent *longitudinal* displacements of various parts of the rod. For clarity, the displacements have been drawn in the transverse direction as they were for air columns. The midpoint is a displacement node because it is fixed by the clamp, whereas the ends are displacement antinodes because they are free to oscillate. The oscillations in this setup are analogous to those in a pipe open at both ends. The red-brown lines in Figure 18.15a represent the first normal mode, for which the wavelength is $2L$ and the frequency is $f = v/2L$, where v is the speed of longitudinal waves in the rod. Other normal modes may be excited by clamping the rod at different points. For example, the second normal mode (Fig. 18.15b) is excited by clamping the rod a distance $L/4$ away from one end.

It is also possible to set up transverse standing waves in rods. Musical instruments that depend on transverse standing waves in rods or bars include triangles, marimbas, xylophones, glockenspiels, chimes, and vibraphones. Other devices that make sounds from vibrating bars include music boxes and wind chimes.

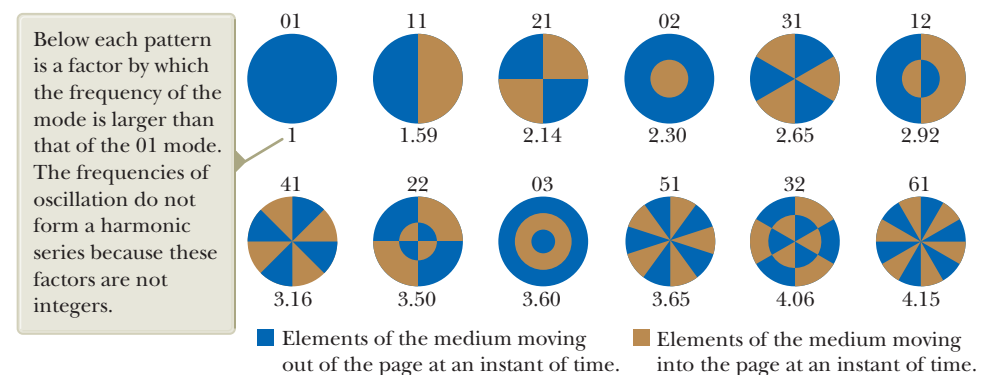
Two-dimensional oscillations can be set up in a flexible membrane stretched over a circular hoop such as that in a drumhead. As the membrane is struck at some point, waves that arrive at the fixed boundary are reflected many times. The resulting sound is not harmonic because the standing waves have frequencies that are *not* related by integer multiples. Without this relationship, the sound may be more correctly described as *noise* rather than as music. The production of noise is in contrast to the situation in wind and stringed instruments, which produce sounds that we describe as musical.

Some possible normal modes of oscillation for a two-dimensional circular membrane are shown in Figure 18.16. Whereas nodes are *points* in one-dimensional standing waves on strings and in air columns, a two-dimensional oscillator has *curves* along which there is no displacement of the elements of the medium. The lowest normal mode, which has a frequency f_1 , contains only one nodal curve; this curve runs around the outer edge of the membrane. The other possible normal modes show additional nodal curves that are circles and straight lines across the diameter of the membrane.

18.7 Beats: Interference in Time

The interference phenomena we have studied so far involve the superposition of two or more waves having the same frequency. Because the amplitude of the oscil-

Figure 18.16 Representation of some of the normal modes possible in a circular membrane fixed at its perimeter. The pair of numbers above each pattern corresponds to the number of radial nodes and the number of circular nodes, respectively. In each diagram, elements of the membrane on either side of a nodal line move in opposite directions, as indicated by the colors. (Adapted from T. D. Rossing, *The Science of Sound*, 3rd ed., Reading, Massachusetts, Addison-Wesley Publishing Co., 2001)



lation of elements of the medium varies with the position in space of the element in such a wave, we refer to the phenomenon as *spatial interference*. Standing waves in strings and pipes are common examples of spatial interference.

Now let's consider another type of interference, one that results from the superposition of two waves having slightly *different* frequencies. In this case, when the two waves are observed at a point in space, they are periodically in and out of phase. That is, there is a *temporal* (time) alternation between constructive and destructive interference. As a consequence, we refer to this phenomenon as *interference in time* or *temporal interference*. For example, if two tuning forks of slightly different frequencies are struck, one hears a sound of periodically varying amplitude. This phenomenon is called **beating**.

Beating is the periodic variation in amplitude at a given point due to the superposition of two waves having slightly different frequencies.

◀ Definition of beating

The number of amplitude maxima one hears per second, or the *beat frequency*, equals the difference in frequency between the two sources as we shall show below. The maximum beat frequency that the human ear can detect is about 20 beats/s. When the beat frequency exceeds this value, the beats blend indistinguishably with the sounds producing them.

Consider two sound waves of equal amplitude and slightly different frequencies f_1 and f_2 traveling through a medium. We use equations similar to Equation 16.13 to represent the wave functions for these two waves at a point that we identify as $x = 0$. We also choose the phase angle in Equation 16.13 as $\phi = \pi/2$:

$$y_1 = A \sin\left(\frac{\pi}{2} - \omega_1 t\right) = A \cos(2\pi f_1 t)$$

$$y_2 = A \sin\left(\frac{\pi}{2} - \omega_2 t\right) = A \cos(2\pi f_2 t)$$

Using the superposition principle, we find that the resultant wave function at this point is

$$y = y_1 + y_2 = A (\cos 2\pi f_1 t + \cos 2\pi f_2 t)$$

The trigonometric identity

$$\cos a + \cos b = 2 \cos\left(\frac{a-b}{2}\right) \cos\left(\frac{a+b}{2}\right)$$

allows us to write the expression for y as

$$y = \left[2A \cos 2\pi\left(\frac{f_1 - f_2}{2}\right)t\right] \cos 2\pi\left(\frac{f_1 + f_2}{2}\right)t \quad (18.10)$$

◀ Resultant of two waves of different frequencies but equal amplitude

Graphs of the individual waves and the resultant wave are shown in Figure 18.17. From the factors in Equation 18.10, we see that the resultant wave has an effective

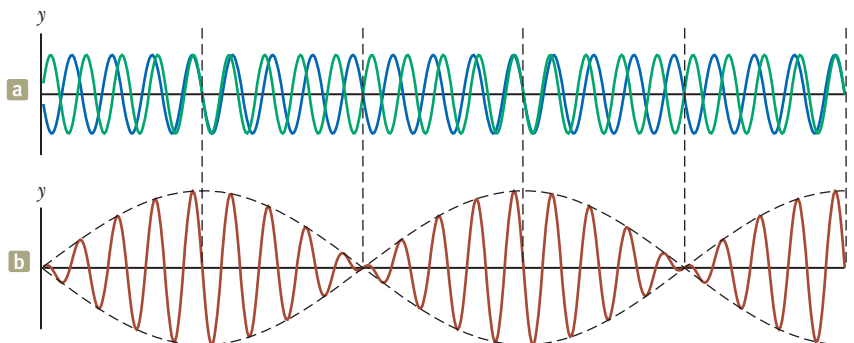


Figure 18.17 Beats are formed by the combination of two waves of slightly different frequencies. (a) The individual waves. (b) The combined wave. The envelope wave (dashed line) represents the beating of the combined sounds.

frequency equal to the average frequency $(f_1 + f_2)/2$. This wave is multiplied by an envelope wave given by the expression in the square brackets:

$$y_{\text{envelope}} = 2A \cos 2\pi \left(\frac{f_1 - f_2}{2} \right) t \quad (18.11)$$

That is, the amplitude and therefore the intensity of the resultant sound vary in time. The dashed black line in Figure 18.17b is a graphical representation of the envelope wave in Equation 18.11 and is a sine wave varying with frequency $(f_1 - f_2)/2$.

A maximum in the amplitude of the resultant sound wave is detected whenever

$$\cos 2\pi \left(\frac{f_1 - f_2}{2} \right) t = \pm 1$$

Hence, there are *two* maxima in each period of the envelope wave. Because the amplitude varies with frequency as $(f_1 - f_2)/2$, the number of beats per second, or the **beat frequency** f_{beat} , is twice this value. That is,

Beat frequency ►

$$f_{\text{beat}} = |f_1 - f_2| \quad (18.12)$$

For instance, if one tuning fork vibrates at 438 Hz and a second one vibrates at 442 Hz, the resultant sound wave of the combination has a frequency of 440 Hz (the musical note A) and a beat frequency of 4 Hz. A listener would hear a 440-Hz sound wave go through an intensity maximum four times every second.

Example 18.7 The Mistuned Piano Strings AM

Two identical piano strings of length 0.750 m are each tuned exactly to 440 Hz. The tension in one of the strings is then increased by 1.0%. If they are now struck, what is the beat frequency between the fundamentals of the two strings?

SOLUTION

Conceptualize As the tension in one of the strings is changed, its fundamental frequency changes. Therefore, when both strings are played, they will have different frequencies and beats will be heard.

Categorize We must combine our understanding of the *waves under boundary conditions* model for strings with our new knowledge of beats.

Analyze Set up a ratio of the fundamental frequencies of the two strings using Equation 18.5:

$$\frac{f_2}{f_1} = \frac{(v_2/2L)}{(v_1/2L)} = \frac{v_2}{v_1}$$

Use Equation 16.18 to substitute for the wave speeds on the strings:

$$\frac{f_2}{f_1} = \frac{\sqrt{T_2/\mu}}{\sqrt{T_1/\mu}} = \sqrt{\frac{T_2}{T_1}}$$

Incorporate that the tension in one string is 1.0% larger than the other; that is, $T_2 = 1.010T_1$:

$$\frac{f_2}{f_1} = \sqrt{\frac{1.010T_1}{T_1}} = 1.005$$

Solve for the frequency of the tightened string:

$$f_2 = 1.005f_1 = 1.005(440 \text{ Hz}) = 442 \text{ Hz}$$

Find the beat frequency using Equation 18.12:

$$f_{\text{beat}} = 442 \text{ Hz} - 440 \text{ Hz} = \mathbf{2 \text{ Hz}}$$

Finalize Notice that a 1.0% mistuning in tension leads to an easily audible beat frequency of 2 Hz. A piano tuner can use beats to tune a stringed instrument by “beating” a note against a reference tone of known frequency. The tuner can then adjust the string tension until the frequency of the sound it emits equals the frequency of the reference tone. The tuner does so by tightening or loosening the string until the beats produced by it and the reference source become too infrequent to notice.

18.8 Nonsinusoidal Wave Patterns

It is relatively easy to distinguish the sounds coming from a violin and a saxophone even when they are both playing the same note. On the other hand, a person untrained in music may have difficulty distinguishing a note played on a clarinet from the same note played on an oboe. We can use the pattern of the sound waves from various sources to explain these effects.

When frequencies that are integer multiples of a fundamental frequency are combined to make a sound, the result is a *musical* sound. A listener can assign a pitch to the sound based on the fundamental frequency. Pitch is a psychological reaction to a sound that allows the listener to place the sound on a scale from low to high (bass to treble). Combinations of frequencies that are not integer multiples of a fundamental result in a *noise* rather than a musical sound. It is much harder for a listener to assign a pitch to a noise than to a musical sound.

The wave patterns produced by a musical instrument are the result of the superposition of frequencies that are integer multiples of a fundamental. This superposition results in the corresponding richness of musical tones. The human perceptive response associated with various mixtures of harmonics is the *quality* or *timbre* of the sound. For instance, the sound of the trumpet is perceived to have a “brassy” quality (that is, we have learned to associate the adjective *brassy* with that sound); this quality enables us to distinguish the sound of the trumpet from that of the saxophone, whose quality is perceived as “reedy.” The clarinet and oboe, however, both contain air columns excited by reeds; because of this similarity, they have similar mixtures of frequencies and it is more difficult for the human ear to distinguish them on the basis of their sound quality.

The sound wave patterns produced by the majority of musical instruments are nonsinusoidal. Characteristic patterns produced by a tuning fork, a flute, and a clarinet, each playing the same note, are shown in Figure 18.18. Each instrument has its own characteristic pattern. Notice, however, that despite the differences in the patterns, each pattern is periodic. This point is important for our analysis of these waves.

The problem of analyzing nonsinusoidal wave patterns appears at first sight to be a formidable task. If the wave pattern is periodic, however, it can be represented as closely as desired by the combination of a sufficiently large number of sinusoidal waves that form a harmonic series. In fact, we can represent any periodic function as a series of sine and cosine terms by using a mathematical technique based on **Fourier’s theorem**.² The corresponding sum of terms that represents the periodic wave pattern is called a **Fourier series**. Let $y(t)$ be any function that is periodic in time with period T such that $y(t + T) = y(t)$. Fourier’s theorem states that this function can be written as

$$y(t) = \sum (A_n \sin 2\pi f_n t + B_n \cos 2\pi f_n t) \quad (18.13)$$

where the lowest frequency is $f_1 = 1/T$. The higher frequencies are integer multiples of the fundamental, $f_n = n f_1$, and the coefficients A_n and B_n represent the amplitudes of the various waves. Figure 18.19 on page 554 represents a harmonic analysis of the wave patterns shown in Figure 18.18. Each bar in the graph represents one of the terms in the series in Equation 18.13 up to $n = 9$. Notice that a struck tuning fork produces only one harmonic (the first), whereas the flute and clarinet produce the first harmonic and many higher ones.

Notice the variation in relative intensity of the various harmonics for the flute and the clarinet. In general, any musical sound consists of a fundamental frequency f plus other frequencies that are integer multiples of f , all having different intensities.

Pitfall Prevention 18.4

Pitch Versus Frequency Do not confuse the term *pitch* with *frequency*. Frequency is the physical measurement of the number of oscillations per second. Pitch is a psychological reaction to sound that enables a person to place the sound on a scale from high to low or from treble to bass. Therefore, frequency is the stimulus and pitch is the response. Although pitch is related mostly (but not completely) to frequency, they are not the same. A phrase such as “the pitch of the sound” is incorrect because pitch is not a physical property of the sound.

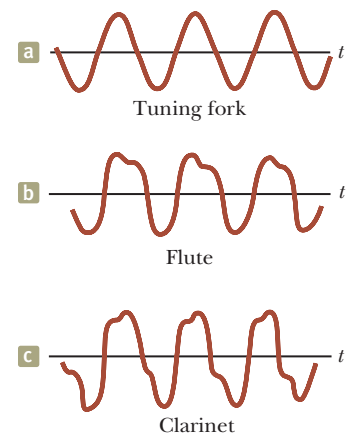


Figure 18.18 Sound wave patterns produced by (a) a tuning fork, (b) a flute, and (c) a clarinet, each at approximately the same frequency.

Fourier's theorem

² Developed by Jean Baptiste Joseph Fourier (1786–1830).

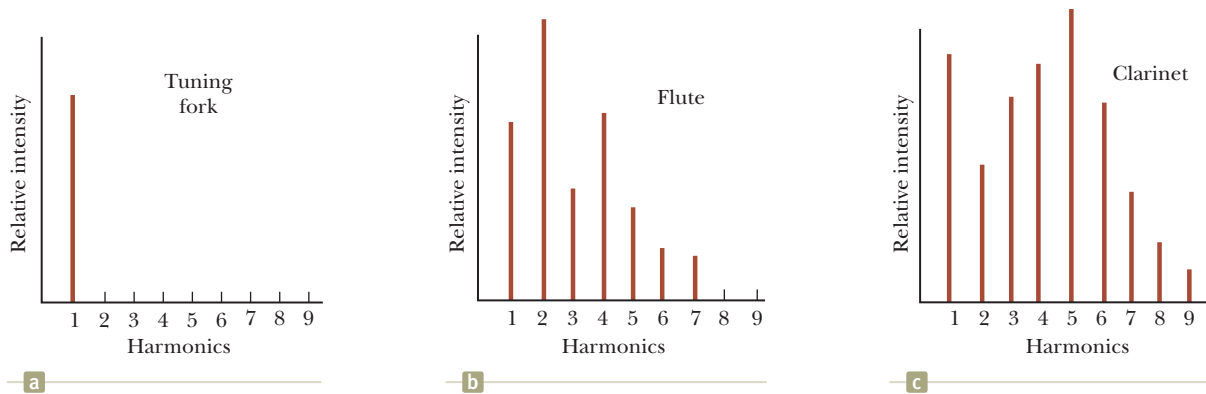


Figure 18.19 Harmonics of the wave patterns shown in Figure 18.18. Notice the variations in intensity of the various harmonics. Parts (a), (b), and (c) correspond to those in Figure 18.18.

We have discussed the *analysis* of a wave pattern using Fourier's theorem. The analysis involves determining the coefficients of the harmonics in Equation 18.13 from a knowledge of the wave pattern. The reverse process, called *Fourier synthesis*, can also be performed. In this process, the various harmonics are added together to form a resultant wave pattern. As an example of Fourier synthesis, consider the building of a square wave as shown in Figure 18.20. The symmetry of the square wave results in only odd multiples of the fundamental frequency combining in its synthesis. In Figure 18.20a, the blue curve shows the combination of f and $3f$. In Figure 18.20b, we have added $5f$ to the combination and obtained the green curve. Notice how the general shape of the square wave is approximated, even though the upper and lower portions are not flat as they should be.

Figure 18.20c shows the result of adding odd frequencies up to $9f$. This approximation (red-brown curve) to the square wave is better than the approximations in Figures 18.20a and 18.20b. To approximate the square wave as closely as possible, we must add all odd multiples of the fundamental frequency, up to infinite frequency.

Using modern technology, musical sounds can be generated electronically by mixing different amplitudes of any number of harmonics. These widely used electronic music synthesizers are capable of producing an infinite variety of musical tones.

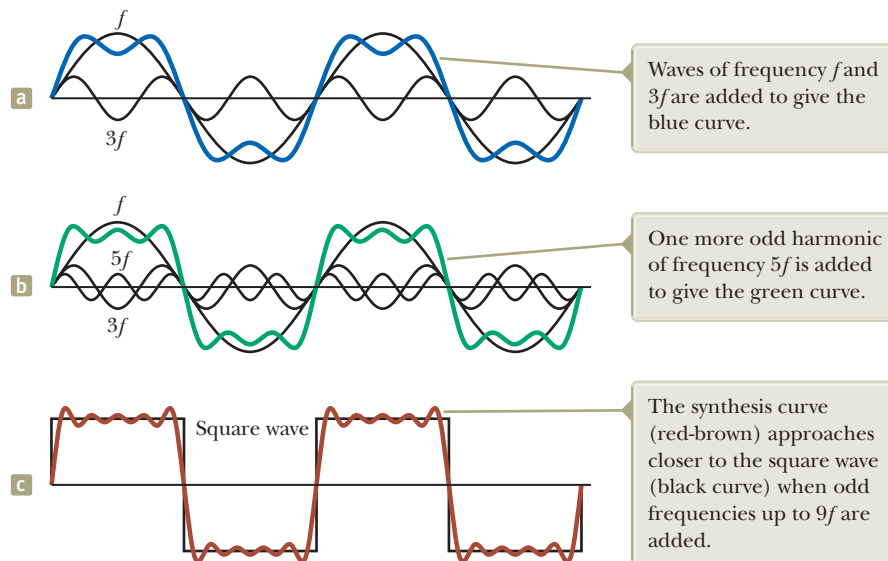


Figure 18.20 Fourier synthesis of a square wave, represented by the sum of odd multiples of the first harmonic, which has frequency f .

Summary

Concepts and Principles

The **superposition principle** specifies that when two or more waves move through a medium, the value of the resultant wave function equals the algebraic sum of the values of the individual wave functions.

The phenomenon of **beating** is the periodic variation in intensity at a given point due to the superposition of two waves having slightly different frequencies. The **beat frequency** is

$$f_{\text{beat}} = |f_1 - f_2| \quad (18.12)$$

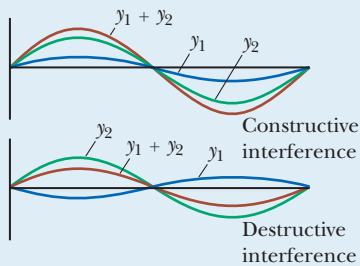
where f_1 and f_2 are the frequencies of the individual waves.

Standing waves are formed from the combination of two sinusoidal waves having the same frequency, amplitude, and wavelength but traveling in opposite directions. The resultant standing wave is described by the wave function

$$y = (2A \sin kx) \cos \omega t \quad (18.1)$$


Hence, the amplitude of the standing wave is $2A$, and the amplitude of the simple harmonic motion of any element of the medium varies according to its position as $2A \sin kx$. The points of zero amplitude (called **nodes**) occur at $x = n\lambda/2$ ($n = 0, 1, 2, 3, \dots$). The maximum amplitude points (called **antinodes**) occur at $x = n\lambda/4$ ($n = 1, 3, 5, \dots$). Adjacent antinodes are separated by a distance $\lambda/2$. Adjacent nodes also are separated by a distance $\lambda/2$.

Analysis Models for Problem Solving



Waves in Interference. When two traveling waves having equal frequencies superimpose, the resultant wave is described by the **principle of superposition** and has an amplitude that depends on the phase angle ϕ between the two waves. **Constructive interference** occurs when the two waves are in phase, corresponding to $\phi = 0, 2\pi, 4\pi, \dots$ rad. **Destructive interference** occurs when the two waves are 180° out of phase, corresponding to $\phi = \pi, 3\pi, 5\pi, \dots$ rad.

Waves Under Boundary Conditions. When a wave is subject to boundary conditions, only certain natural frequencies are allowed; we say that the frequencies are quantized.



For waves on a string fixed at both ends, the natural frequencies are

$$f_n = \frac{n}{2L} \sqrt{\frac{T}{\mu}} \quad n = 1, 2, 3, \dots \quad (18.6)$$

where T is the tension in the string and μ is its linear mass density.

For sound waves with speed v in an air column of length L open at both ends, the natural frequencies are

$$f_n = n \frac{v}{2L} \quad n = 1, 2, 3, \dots \quad (18.8)$$

If an air column is open at one end and closed at the other, only odd harmonics are present and the natural frequencies are

$$f_n = n \frac{v}{4L} \quad n = 1, 3, 5, \dots \quad (18.9)$$

Objective Questions

1. denotes answer available in *Student Solutions Manual/Study Guide*

1. In Figure OQ18.1 (page 556), a sound wave of wavelength 0.8 m divides into two equal parts that recombine to interfere constructively, with the original difference between their path lengths being $|r_2 - r_1| = 0.8$ m.

Rank the following situations according to the intensity of sound at the receiver from the highest to the lowest. Assume the tube walls absorb no sound energy. Give equal ranks to situations in which the intensity is equal.

(a) From its original position, the sliding section is moved out by 0.1 m. (b) Next it slides out an additional 0.1 m. (c) It slides out still another 0.1 m. (d) It slides out 0.1 m more.

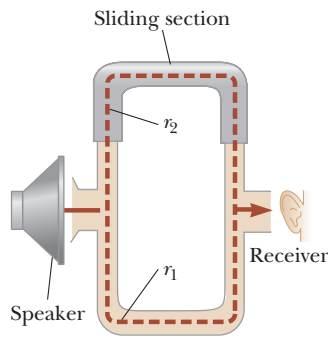


Figure OQ18.1 Objective Question 1 and Problem 6.

- A string of length L , mass per unit length μ , and tension T is vibrating at its fundamental frequency. (i) If the length of the string is doubled, with all other factors held constant, what is the effect on the fundamental frequency? (a) It becomes two times larger. (b) It becomes $\sqrt{2}$ times larger. (c) It is unchanged. (d) It becomes $1/\sqrt{2}$ times as large. (e) It becomes one-half as large. (ii) If the mass per unit length is doubled, with all other factors held constant, what is the effect on the fundamental frequency? Choose from the same possibilities as in part (i). (iii) If the tension is doubled, with all other factors held constant, what is the effect on the fundamental frequency? Choose from the same possibilities as in part (i).
- In Example 18.1, we investigated an oscillator at 1.3 kHz driving two identical side-by-side speakers. We found that a listener at point O hears sound with maximum intensity, whereas a listener at point P hears a minimum. What is the intensity at P ? (a) less than but close to the intensity at O (b) half the intensity at O (c) very low but not zero (d) zero (e) indeterminate
- A series of pulses, each of amplitude 0.1 m, is sent down a string that is attached to a post at one end. The pulses are reflected at the post and travel back along the string without loss of amplitude. (i) What is the net displacement at a point on the string where two pulses are crossing? Assume the string is rigidly attached to the post. (a) 0.4 m (b) 0.3 m (c) 0.2 m (d) 0.1 m (e) 0 (ii) Next assume the end at which reflection occurs is free to slide up and down. Now what is the net displacement at a point on the string where two pulses are crossing? Choose your answer from the same possibilities as in part (i).
- A flute has a length of 58.0 cm. If the speed of sound in air is 343 m/s, what is the fundamental frequency of the flute, assuming it is a tube closed at one end and open at the other? (a) 148 Hz (b) 296 Hz (c) 444 Hz (d) 591 Hz (e) none of those answers
- When two tuning forks are sounded at the same time, a beat frequency of 5 Hz occurs. If one of the tuning

forks has a frequency of 245 Hz, what is the frequency of the other tuning fork? (a) 240 Hz (b) 242.5 Hz (c) 247.5 Hz (d) 250 Hz (e) More than one answer could be correct.

- A tuning fork is known to vibrate with frequency 262 Hz. When it is sounded along with a mandolin string, four beats are heard every second. Next, a bit of tape is put onto each tine of the tuning fork, and the tuning fork now produces five beats per second with the same mandolin string. What is the frequency of the string? (a) 257 Hz (b) 258 Hz (c) 262 Hz (d) 266 Hz (e) 267 Hz
- An archer shoots an arrow horizontally from the center of the string of a bow held vertically. After the arrow leaves it, the string of the bow will vibrate as a superposition of what standing-wave harmonics? (a) It vibrates only in harmonic number 1, the fundamental. (b) It vibrates only in the second harmonic. (c) It vibrates only in the odd-numbered harmonics 1, 3, 5, 7, . . . (d) It vibrates only in the even-numbered harmonics 2, 4, 6, 8, . . . (e) It vibrates in all harmonics.
- As oppositely moving pulses of the same shape (one upward, one downward) on a string pass through each other, at one particular instant the string shows no displacement from the equilibrium position at any point. What has happened to the energy carried by the pulses at this instant of time? (a) It was used up in producing the previous motion. (b) It is all potential energy. (c) It is all internal energy. (d) It is all kinetic energy. (e) The positive energy of one pulse adds to zero with the negative energy of the other pulse.
- A standing wave having three nodes is set up in a string fixed at both ends. If the frequency of the wave is doubled, how many antinodes will there be? (a) 2 (b) 3 (c) 4 (d) 5 (e) 6
- Suppose all six equal-length strings of an acoustic guitar are played without fingering, that is, without being pressed down at any frets. What quantities are the same for all six strings? Choose all correct answers. (a) the fundamental frequency (b) the fundamental wavelength of the string wave (c) the fundamental wavelength of the sound emitted (d) the speed of the string wave (e) the speed of the sound emitted
- Assume two identical sinusoidal waves are moving through the same medium in the same direction. Under what condition will the amplitude of the resultant wave be greater than either of the two original waves? (a) in all cases (b) only if the waves have no difference in phase (c) only if the phase difference is less than 90° (d) only if the phase difference is less than 120° (e) only if the phase difference is less than 180°

Conceptual Questions

1. denotes answer available in *Student Solutions Manual/Study Guide*

- A crude model of the human throat is that of a pipe open at both ends with a vibrating source to introduce the sound into the pipe at one end. Assuming the vibrating source produces a range of frequencies, discuss the effect of changing the pipe's length.
- When two waves interfere constructively or destructively, is there any gain or loss in energy in the system of the waves? Explain.
- Explain how a musical instrument such as a piano may be tuned by using the phenomenon of beats.

- What limits the amplitude of motion of a real vibrating system that is driven at one of its resonant frequencies?
- A tuning fork by itself produces a faint sound. Explain how each of the following methods can be used to obtain a louder sound from it. Explain also any effect on the time interval for which the fork vibrates audibly. (a) holding the edge of a sheet of paper against one vibrating tine (b) pressing the handle of the tuning fork against a chalkboard or a tabletop (c) holding the tuning fork above a column of air of properly chosen length as in Example 18.6 (d) holding the tuning fork close to an open slot cut in a sheet of foam plastic or cardboard (with the slot similar in size and shape to one tine of the fork and the motion of the tines perpendicular to the sheet)
- An airplane mechanic notices that the sound from a twin-engine aircraft rapidly varies in loudness when both engines are running. What could be causing this variation from loud to soft?
- Despite a reasonably steady hand, a person often spills his coffee when carrying it to his seat. Discuss resonance as a possible cause of this difficulty and devise a means for preventing the spills.
- A soft-drink bottle resonates as air is blown across its top. What happens to the resonance frequency as the level of fluid in the bottle decreases?
- Does the phenomenon of wave interference apply only to sinusoidal waves?

Problems

ENHANCED

WebAssign

The problems found in this chapter may be assigned

online in Enhanced WebAssign

- straightforward; 2. intermediate;
- challenging

1. full solution available in the *Student Solutions Manual/Study Guide*

AMT

Analysis Model tutorial available in Enhanced WebAssign

GP

Guided Problem

M

Master It tutorial available in Enhanced WebAssign

W

Watch It video solution available in Enhanced WebAssign

Note: Unless otherwise specified, assume the speed of sound in air is 343 m/s, its value at an air temperature of 20.0°C. At any other Celsius temperature T_C , the speed of sound in air is described by

$$v = 331 \sqrt{1 + \frac{T_C}{273}}$$

where v is in m/s and T is in °C.

Section 18.1 Analysis Model: Waves in Interference

- Two waves are traveling in the same direction along a stretched string. The waves are 90.0° out of phase. Each wave has an amplitude of 4.00 cm. Find the amplitude of the resultant wave.
- Two wave pulses A and B are moving in opposite directions, each with a speed $v = 2.00$ cm/s. The amplitude of A is twice the amplitude of B. The pulses are shown in Figure P18.2 at $t = 0$. Sketch the resultant wave at $t = 1.00$ s, 1.50 s, 2.00 s, 2.50 s, and 3.00 s.

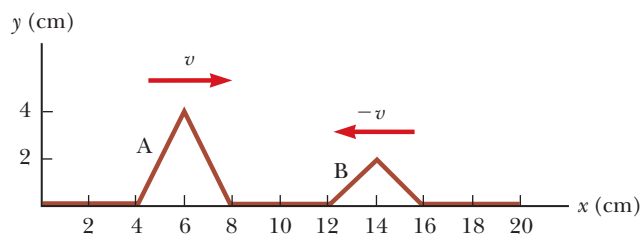


Figure P18.2

- Two waves on one string are described by the wave functions

$$y_1 = 3.0 \cos(4.0x - 1.6t) \quad y_2 = 4.0 \sin(5.0x - 2.0t)$$

where x and y are in centimeters and t is in seconds. Find the superposition of the waves $y_1 + y_2$ at the points (a) $x = 1.00$, $t = 1.00$; (b) $x = 1.00$, $t = 0.500$; and (c) $x = 0.500$, $t = 0$. *Note:* Remember that the arguments of the trigonometric functions are in radians.

- Two pulses of different amplitudes approach each other, each having a speed of $v = 1.00$ m/s. Figure P18.4 shows the positions of the pulses at time $t = 0$. (a) Sketch the resultant wave at $t = 2.00$ s, 4.00 s, 5.00 s, and 6.00 s. (b) **What If?** If the pulse on the right is inverted so that it is upright, how would your sketches of the resultant wave change?

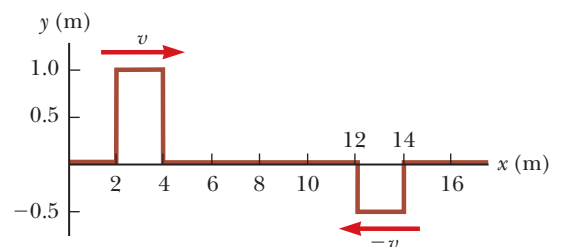


Figure P18.4

- A tuning fork generates sound waves with a frequency of 246 Hz. The waves travel in opposite directions along a hallway, are reflected by end walls, and return. The hallway is 47.0 m long and the tuning fork is located 14.0 m from one end. What is the phase difference

between the reflected waves when they meet at the tuning fork? The speed of sound in air is 343 m/s.

6. The acoustical system shown in Figure OQ18.1 is driven by a speaker emitting sound of frequency 756 Hz. (a) If constructive interference occurs at a particular location of the sliding section, by what minimum amount should the sliding section be moved upward so that destructive interference occurs instead? (b) What minimum distance from the original position of the sliding section will again result in constructive interference?

7. Two pulses traveling on the same string are described by

$$y_1 = \frac{5}{(3x - 4t)^2 + 2} \quad y_2 = \frac{-5}{(3x + 4t - 6)^2 + 2}$$

(a) In which direction does each pulse travel? (b) At what instant do the two cancel everywhere? (c) At what point do the two pulses always cancel?

8. Two identical loudspeakers are placed on a wall 2.00 m apart. A listener stands 3.00 m from the wall directly in front of one of the speakers. A single oscillator is driving the speakers at a frequency of 300 Hz. (a) What is the phase difference in radians between the waves from the speakers when they reach the observer? (b) **What If?** What is the frequency closest to 300 Hz to which the oscillator may be adjusted such that the observer hears minimal sound?

9. Two traveling sinusoidal waves are described by the wave functions

$$y_1 = 5.00 \sin [\pi(4.00x - 1200t)]$$

$$y_2 = 5.00 \sin [\pi(4.00x - 1200t - 0.250)]$$

where x , y_1 , and y_2 are in meters and t is in seconds. (a) What is the amplitude of the resultant wave function $y_1 + y_2$? (b) What is the frequency of the resultant wave function?

10. Why is the following situation impossible? Two identical loudspeakers are driven by the same oscillator at frequency 200 Hz. They are located on the ground a distance $d = 4.00$ m from each other. Starting far from the speakers, a man walks straight toward the right-hand speaker as shown in Figure P18.10. After passing through three minima in sound intensity, he walks to the next maximum and stops. Ignore any sound reflection from the ground.

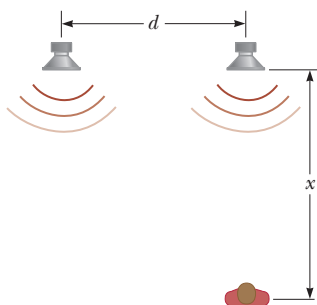


Figure P18.10

11. Two sinusoidal waves in a string are defined by the wave functions

$$y_1 = 2.00 \sin (20.0x - 32.0t) \quad y_2 = 2.00 \sin (25.0x - 40.0t)$$

where x , y_1 , and y_2 are in centimeters and t is in seconds. (a) What is the phase difference between these two waves at the point $x = 5.00$ cm at $t = 2.00$ s? (b) What is the positive x value closest to the origin for which the two phases differ by $\pm\pi$ at $t = 2.00$ s? (At that location, the two waves add to zero.)

12. Two identical sinusoidal waves with wavelengths of 3.00 m travel in the same direction at a speed of 2.00 m/s. The second wave originates from the same point as the first, but at a later time. The amplitude of the resultant wave is the same as that of each of the two initial waves. Determine the minimum possible time interval between the starting moments of the two waves.
13. Two identical loudspeakers 10.0 m apart are driven by the same oscillator with a frequency of $f = 21.5$ Hz (Fig. P18.13) in an area where the speed of sound is 344 m/s. (a) Show that a receiver at point A records a minimum in sound intensity from the two speakers. (b) If the receiver is moved in the plane of the speakers, show that the path it should take so that the intensity remains at a minimum is along the hyperbola $9x^2 - 16y^2 = 144$ (shown in red-brown in Fig. P18.13). (c) Can the receiver remain at a minimum and move very far away from the two sources? If so, determine the limiting form of the path it must take. If not, explain how far it can go.

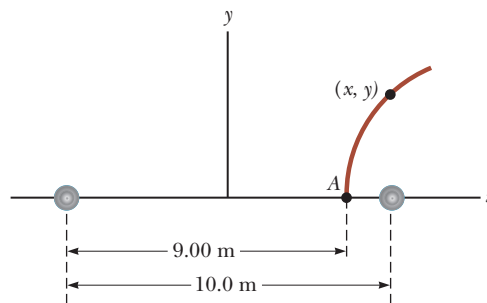


Figure P18.13

Section 18.2 Standing Waves

14. Two waves simultaneously present on a long string have a phase difference ϕ between them so that a standing wave formed from their combination is described by

$$y(x, t) = 2A \sin \left(kx + \frac{\phi}{2} \right) \cos \left(\omega t - \frac{\phi}{2} \right)$$

(a) Despite the presence of the phase angle ϕ , is it still true that the nodes are one-half wavelength apart? Explain. (b) Are the nodes different in any way from the way they would be if ϕ were zero? Explain.

15. Two sinusoidal waves traveling in opposite directions interfere to produce a standing wave with the wave function

$$y = 1.50 \sin (0.400x) \cos (200t)$$

where x and y are in meters and t is in seconds. Determine (a) the wavelength, (b) the frequency, and (c) the speed of the interfering waves.

16. Verify by direct substitution that the wave function for a standing wave given in Equation 18.1,

$$y = (2A \sin kx) \cos \omega t$$

is a solution of the general linear wave equation, Equation 16.27:

$$\frac{\partial^2 y}{\partial x^2} = \frac{1}{v^2} \frac{\partial^2 y}{\partial t^2}$$

17. Two transverse sinusoidal waves combining in a medium are described by the wave functions

$$y_1 = 3.00 \sin \pi(x + 0.600t) \quad y_2 = 3.00 \sin \pi(x - 0.600t)$$

where x , y_1 , and y_2 are in centimeters and t is in seconds. Determine the maximum transverse position of an element of the medium at (a) $x = 0.250$ cm, (b) $x = 0.500$ cm, and (c) $x = 1.50$ cm. (d) Find the three smallest values of x corresponding to antinodes.

18. A standing wave is described by the wave function

$$y = 6 \sin \left(\frac{\pi}{2} x \right) \cos (100\pi t)$$

where x and y are in meters and t is in seconds. (a) Prepare graphs showing y as a function of x for five instants: $t = 0$, 5 ms, 10 ms, 15 ms, and 20 ms. (b) From the graph, identify the wavelength of the wave and explain how to do so. (c) From the graph, identify the frequency of the wave and explain how to do so. (d) From the equation, directly identify the wavelength of the wave and explain how to do so. (e) From the equation, directly identify the frequency and explain how to do so.

19. Two identical loudspeakers are driven in phase by a common oscillator at 800 Hz and face each other at a distance of 1.25 m. Locate the points along the line joining the two speakers where relative minima of sound pressure amplitude would be expected.

Section 18.3 Analysis Model: Waves Under Boundary Conditions

20. A standing wave is established in a 120-cm-long string fixed at both ends. The string vibrates in four segments when driven at 120 Hz. (a) Determine the wavelength. (b) What is the fundamental frequency of the string?

21. A string with a mass $m = 8.00$ g and a length $L = 5.00$ m has one end attached to a wall; the other end is draped over a small, fixed pulley a distance $d = 4.00$ m from the wall and attached to a hanging object with a mass $M = 4.00$ kg as in Figure P18.21. If the horizontal part of the string is plucked, what is the fundamental frequency of its vibration?

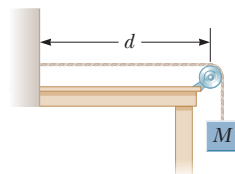


Figure P18.21

22. The 64.0-cm-long string of a guitar has a fundamental frequency of 330 Hz when it vibrates freely along its

entire length. A fret is provided for limiting vibration to just the lower two-thirds of the string. (a) If the string is pressed down at this fret and plucked, what is the new fundamental frequency? (b) **What If?** The guitarist can play a “natural harmonic” by gently touching the string at the location of this fret and plucking the string at about one-sixth of the way along its length from the other end. What frequency will be heard then?

23. The A string on a cello vibrates in its first normal mode with a frequency of 220 Hz. The vibrating segment is 70.0 cm long and has a mass of 1.20 g. (a) Find the tension in the string. (b) Determine the frequency of vibration when the string vibrates in three segments.

24. A taut string has a length of 2.60 m and is fixed at both ends. (a) Find the wavelength of the fundamental mode of vibration of the string. (b) Can you find the frequency of this mode? Explain why or why not.

25. A certain vibrating string on a piano has a length of 74.0 cm and forms a standing wave having two antinodes. (a) Which harmonic does this wave represent? (b) Determine the wavelength of this wave. (c) How many nodes are there in the wave pattern?

26. A string that is 30.0 cm long and has a mass per unit length of 9.00×10^{-3} kg/m is stretched to a tension of 20.0 N. Find (a) the fundamental frequency and (b) the next three frequencies that could cause standing-wave patterns on the string.

27. In the arrangement shown in Figure P18.27, an object can be hung from a string (with linear mass density $\mu = 0.00200$ kg/m) that passes over a light pulley. The string is connected to a vibrator (of constant frequency f), and the length of the string between point P and the pulley is $L = 2.00$ m. When the mass m of the object is either 16.0 kg or 25.0 kg, standing waves are observed; no standing waves are observed with any mass between these values, however. (a) What is the frequency of the vibrator? *Note:* The greater the tension in the string, the smaller the number of nodes in the standing wave. (b) What is the largest object mass for which standing waves could be observed?

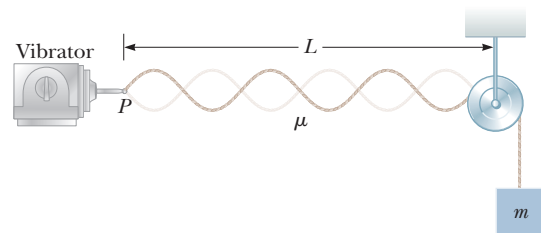


Figure P18.27 Problems 27 and 28.

28. In the arrangement shown in Figure P18.27, an object of mass $m = 5.00$ kg hangs from a cord around a light pulley. The length of the cord between point P and the pulley is $L = 2.00$ m. (a) When the vibrator is set to a frequency of 150 Hz, a standing wave with six loops is formed. What must be the linear mass density of the cord? (b) How many loops (if any) will result if m is changed to 45.0 kg? (c) How many loops (if any) will result if m is changed to 10.0 kg?

29. **Review.** A sphere of mass $M = 1.00$ kg is supported by a string that passes over a pulley at the end of a horizontal rod of length $L = 0.300$ m (Fig. P18.29). The string makes an angle $\theta = 35.0^\circ$ with the rod. The fundamental frequency of standing waves in the portion of the string above the rod is $f = 60.0$ Hz. Find the mass of the portion of the string above the rod.

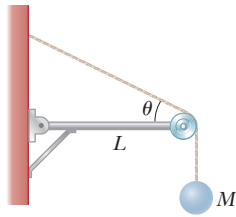


Figure P18.29
Problems 29 and 30.

30. **Review.** A sphere of mass M is supported by a string that passes over a pulley at the end of a horizontal rod of length L (Fig. P18.29). The string makes an angle θ with the rod. The fundamental frequency of standing waves in the portion of the string above the rod is f . Find the mass of the portion of the string above the rod.
31. A violin string has a length of 0.350 m and is tuned to concert G, with $f_G = 392$ Hz. (a) How far from the end of the string must the violinist place her finger to play concert A, with $f_A = 440$ Hz? (b) If this position is to remain correct to one-half the width of a finger (that is, to within 0.600 cm), what is the maximum allowable percentage change in the string tension?
32. **Review.** A solid copper object hangs at the bottom of a steel wire of negligible mass. The top end of the wire is fixed. When the wire is struck, it emits sound with a fundamental frequency of 300 Hz. The copper object is then submerged in water so that half its volume is below the water line. Determine the new fundamental frequency.
33. A standing-wave pattern is observed in a thin wire with a length of 3.00 m. The wave function is

$$y = 0.00200 \sin(\pi x) \cos(100\pi t)$$

where x and y are in meters and t is in seconds. (a) How many loops does this pattern exhibit? (b) What is the fundamental frequency of vibration of the wire? (c) **What If?** If the original frequency is held constant and the tension in the wire is increased by a factor of 9, how many loops are present in the new pattern?

Section 18.4 Resonance

34. The Bay of Fundy, Nova Scotia, has the highest tides in the world. Assume in midocean and at the mouth of the bay the Moon's gravity gradient and the Earth's rotation make the water surface oscillate with an amplitude of a few centimeters and a period of 12 h 24 min. At the head of the bay, the amplitude is several meters. Assume the bay has a length of 210 km and a uniform depth of 36.1 m. The speed of long-wavelength water waves is given by $v = \sqrt{gd}$, where d is the water's depth. Argue for or against the proposition that the tide is magnified by standing-wave resonance.
35. An earthquake can produce a *seiche* in a lake in which the water sloshes back and forth from end to end with remarkably large amplitude and long period. Con-

sider a seiche produced in a farm pond. Suppose the pond is 9.15 m long and assume it has a uniform width and depth. You measure that a pulse produced at one end reaches the other end in 2.50 s. (a) What is the wave speed? (b) What should be the frequency of the ground motion during the earthquake to produce a seiche that is a standing wave with antinodes at each end of the pond and one node at the center?

36. High-frequency sound can be used to produce standing-wave vibrations in a wine glass. A standing-wave vibration in a wine glass is observed to have four nodes and four antinodes equally spaced around the 20.0 -cm circumference of the rim of the glass. If transverse waves move around the glass at 900 m/s, an opera singer would have to produce a high harmonic with what frequency to shatter the glass with a resonant vibration as shown in Figure P18.36?



Figure P18.36

Section 18.5 Standing Waves in Air Columns

37. The windpipe of one typical whooping crane is 5.00 feet long. What is the fundamental resonant frequency of the bird's trachea, modeled as a narrow pipe closed at one end? Assume a temperature of 37°C .
38. If a human ear canal can be thought of as resembling an organ pipe, closed at one end, that resonates at a fundamental frequency of 3000 Hz, what is the length of the canal? Use a normal body temperature of 37°C for your determination of the speed of sound in the canal.
39. Calculate the length of a pipe that has a fundamental frequency of 240 Hz assuming the pipe is (a) closed at one end and (b) open at both ends.
40. The overall length of a piccolo is 32.0 cm. The resonating air column is open at both ends. (a) Find the frequency of the lowest note a piccolo can sound. (b) Opening holes in the side of a piccolo effectively shortens the length of the resonant column. Assume the highest note a piccolo can sound is 4000 Hz. Find the distance between adjacent antinodes for this mode of vibration.
41. The fundamental frequency of an open organ pipe corresponds to middle C (261.6 Hz on the chromatic musical scale). The third resonance of a closed organ pipe has the same frequency. What is the length of (a) the open pipe and (b) the closed pipe?
42. The longest pipe on a certain organ is 4.88 m. What is the fundamental frequency (at 0.00°C) if the pipe is (a) closed at one end and (b) open at each end? (c) What will be the frequencies at 20.0°C ?
43. An air column in a glass tube is open at one end and closed at the other by a movable piston. The air in the tube is warmed above room temperature, and a 384 -Hz tuning fork is held at the open end. Resonance is heard

when the piston is at a distance $d_1 = 22.8$ cm from the open end and again when it is at a distance $d_2 = 68.3$ cm from the open end. (a) What speed of sound is implied by these data? (b) How far from the open end will the piston be when the next resonance is heard?

44. A tuning fork with a frequency of $f = 512$ Hz is placed near the top of the tube shown in Figure P18.44. The water level is lowered so that the length L slowly increases from an initial value of 20.0 cm. Determine the next two values of L that correspond to resonant modes.

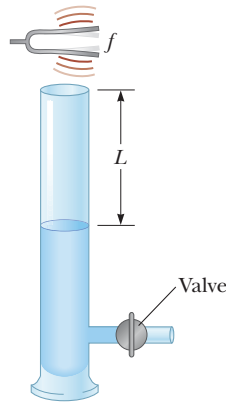


Figure P18.44

45. With a particular fingering, a flute produces a note with frequency 880 Hz at 20.0°C. The flute is open at both ends. (a) Find the air column length. (b) At the beginning of the halftime performance at a late-season football game, the ambient temperature is -5.00°C and the flutist has not had a chance to warm up her instrument. Find the frequency the flute produces under these conditions.

46. A shower stall has dimensions $86.0\text{ cm} \times 86.0\text{ cm} \times 210\text{ cm}$. Assume the stall acts as a pipe closed at both ends, with nodes at opposite sides. Assume singing voices range from 130 Hz to 2 000 Hz and let the speed of sound in the hot air be 355 m/s. For someone singing in this shower, which frequencies would sound the richest (because of resonance)?

47. A glass tube (open at both ends) of length L is positioned near an audio speaker of frequency $f = 680$ Hz. For what values of L will the tube resonate with the speaker?

48. A tunnel under a river is 2.00 km long. (a) At what frequencies can the air in the tunnel resonate? (b) Explain whether it would be good to make a rule against blowing your car horn when you are in the tunnel.

49. As shown in Figure P18.49, water is pumped into a tall, vertical cylinder at a volume flow rate $R = 1.00$ L/min. The radius of the cylinder is $r = 5.00$ cm, and at the open top of the cylinder a tuning fork is vibrating with a frequency $f = 512$ Hz. As the water rises, what time interval elapses between successive resonances?

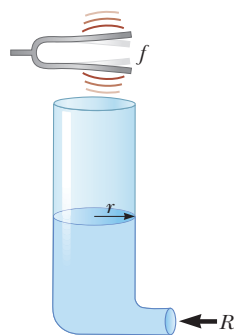


Figure P18.49

Problems 49 and 50.

50. As shown in Figure P18.49, water is pumped into a tall, vertical cylinder at a volume flow rate R . The radius of the cylinder is r , and at the open top of the cylinder a tuning fork is vibrating with a frequency f . As the water rises, what time interval elapses between successive resonances?

51. Two adjacent natural frequencies of an organ pipe are determined to be 550 Hz and 650 Hz. Calculate (a) the fundamental frequency and (b) the length of this pipe.

52. **Why is the following situation impossible?** A student is listening to the sounds from an air column that is 0.730 m long. He doesn't know if the column is open at both ends or open at only one end. He hears resonance from the air column at frequencies 235 Hz and 587 Hz.

53. A student uses an audio oscillator of adjustable frequency to measure the depth of a water well. The student reports hearing two successive resonances at 51.87 Hz and 59.85 Hz. (a) How deep is the well? (b) How many antinodes are in the standing wave at 51.87 Hz?

Section 18.6 Standing Waves in Rods and Membranes

54. An aluminum rod is clamped one-fourth of the way along its length and set into longitudinal vibration by a variable-frequency driving source. The lowest frequency that produces resonance is 4 400 Hz. The speed of sound in an aluminum rod is 5 100 m/s. Determine the length of the rod.

55. An aluminum rod 1.60 m long is held at its center. It is stroked with a rosin-coated cloth to set up a longitudinal vibration. The speed of sound in a thin rod of aluminum is 5 100 m/s. (a) What is the fundamental frequency of the waves established in the rod? (b) What harmonics are set up in the rod held in this manner? (c) **What IF?** What would be the fundamental frequency if the rod were copper, in which the speed of sound is 3 560 m/s?

Section 18.7 Beats: Interference in Time

56. While attempting to tune the note C at 523 Hz, a piano tuner hears 2.00 beats/s between a reference oscillator and the string. (a) What are the possible frequencies of the string? (b) When she tightens the string slightly, she hears 3.00 beats/s. What is the frequency of the string now? (c) By what percentage should the piano tuner now change the tension in the string to bring it into tune?

57. In certain ranges of a piano keyboard, more than one string is tuned to the same note to provide extra loudness. For example, the note at 110 Hz has two strings at this frequency. If one string slips from its normal tension of 600 N to 540 N, what beat frequency is heard when the hammer strikes the two strings simultaneously?

58. **Review.** Jane waits on a railroad platform while two trains approach from the same direction at equal speeds of 8.00 m/s. Both trains are blowing their whistles (which have the same frequency), and one train is some distance behind the other. After the first train passes Jane but before the second train passes her, she hears beats of frequency 4.00 Hz. What is the frequency of the train whistles?

59. **Review.** A student holds a tuning fork oscillating at 256 Hz. He walks toward a wall at a constant speed of 1.33 m/s. (a) What beat frequency does he observe

between the tuning fork and its echo? (b) How fast must he walk away from the wall to observe a beat frequency of 5.00 Hz?

Section 18.8 Nonsinusoidal Wave Patterns

60. An A-major chord consists of the notes called A, C#, and E. It can be played on a piano by simultaneously striking strings with fundamental frequencies of 440.00 Hz, 554.37 Hz, and 659.26 Hz. The rich consonance of the chord is associated with near equality of the frequencies of some of the higher harmonics of the three tones. Consider the first five harmonics of each string and determine which harmonics show near equality.

61. Suppose a flutist plays a 523-Hz C note with first harmonic displacement amplitude $A_1 = 100$ nm. From Figure 18.19b read, by proportion, the displacement amplitudes of harmonics 2 through 7. Take these as the values A_2 through A_7 in the Fourier analysis of the sound and assume $B_1 = B_2 = \dots = B_7 = 0$. Construct a graph of the waveform of the sound. Your waveform will not look exactly like the flute waveform in Figure 18.18b because you simplify by ignoring cosine terms; nevertheless, it produces the same sensation to human hearing.

Additional Problems

62. A pipe open at both ends has a fundamental frequency of 300 Hz when the temperature is 0°C . (a) What is the length of the pipe? (b) What is the fundamental frequency at a temperature of 30.0°C ?
63. A string is 0.400 m long and has a mass per unit length of 9.00×10^{-3} kg/m. What must be the tension in the string if its second harmonic has the same frequency as the second resonance mode of a 1.75-m-long pipe open at one end?
64. Two strings are vibrating at the same frequency of 150 Hz. After the tension in one of the strings is decreased, an observer hears four beats each second when the strings vibrate together. Find the new frequency in the adjusted string.
65. The ship in Figure P18.65 travels along a straight line parallel to the shore and a distance $d = 600$ m from it. The ship's radio receives simultaneous signals of the same frequency from antennas A and B, separated by a distance $L = 800$ m. The signals interfere constructively at point C, which is equidistant from A and B. The signal goes through the first minimum at point D, which is directly outward from the shore from point B. Determine the wavelength of the radio waves.

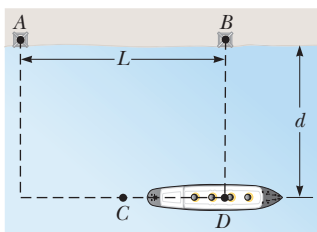


Figure P18.65

66. A 2.00-m-long wire having a mass of 0.100 kg is fixed at both ends. The tension in the wire is maintained at 20.0 N. (a) What are the frequencies of the first three allowed modes of vibration? (b) If a node is observed at a point 0.400 m from one end, in what mode and with what frequency is it vibrating?
67. The fret closest to the bridge on a guitar is 21.4 cm from the bridge as shown in Figure P18.67. When the thinnest string is pressed down at this first fret, the string produces the highest frequency that can be played on that guitar, 2 349 Hz. The next lower note that is produced on the string has frequency 2 217 Hz. How far away from the first fret should the next fret be?

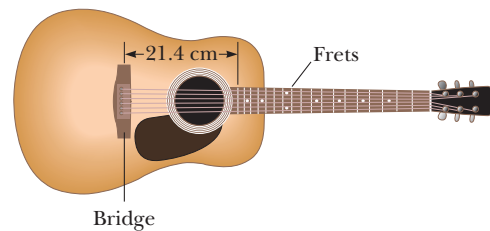


Figure P18.67

68. A string fixed at both ends and having a mass of 4.80 g, a length of 2.00 m, and a tension of 48.0 N vibrates in its second ($n = 2$) normal mode. (a) Is the wavelength in air of the sound emitted by this vibrating string larger or smaller than the wavelength of the wave on the string? (b) What is the ratio of the wavelength in air of the sound emitted by this vibrating string and the wavelength of the wave on the string?
69. A quartz watch contains a crystal oscillator in the form of a block of quartz that vibrates by contracting and expanding. An electric circuit feeds in energy to maintain the oscillation and also counts the voltage pulses to keep time. Two opposite faces of the block, 7.05 mm apart, are antinodes, moving alternately toward each other and away from each other. The plane halfway between these two faces is a node of the vibration. The speed of sound in quartz is equal to 3.70×10^3 m/s. Find the frequency of the vibration.
70. **Review.** For the arrangement shown in Figure P18.70, the inclined plane and the small pulley are frictionless; the string supports the object of mass M at the bottom of the plane; and the string has mass m . The system is in equilibrium, and the vertical part of the string has a length h . We wish to study standing waves set up in the vertical section of the string. (a) What analysis model describes the object of mass M ? (b) What analysis model describes the waves on the vertical part of the

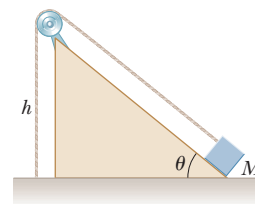


Figure P18.70

string? (c) Find the tension in the string. (d) Model the shape of the string as one leg and the hypotenuse of a right triangle. Find the whole length of the string. (e) Find the mass per unit length of the string. (f) Find the speed of waves on the string. (g) Find the lowest frequency for a standing wave on the vertical section of the string. (h) Evaluate this result for $M = 1.50$ kg, $m = 0.750$ g, $h = 0.500$ m, and $\theta = 30.0^\circ$. (i) Find the numerical value for the lowest frequency for a standing wave on the sloped section of the string.

71. A 0.010 0-kg wire, 2.00 m long, is fixed at both ends and vibrates in its simplest mode under a tension of 200 N. When a vibrating tuning fork is placed near the wire, a beat frequency of 5.00 Hz is heard. (a) What could be the frequency of the tuning fork? (b) What should the tension in the wire be if the beats are to disappear?
72. Two speakers are driven by the same oscillator of frequency f . They are located a distance d from each other on a vertical pole. A man walks straight toward the lower speaker in a direction perpendicular to the pole as shown in Figure P18.72. (a) How many times will he hear a minimum in sound intensity? (b) How far is he from the pole at these moments? Let v represent the speed of sound and assume that the ground does not reflect sound. The man's ears are at the same level as the lower speaker.

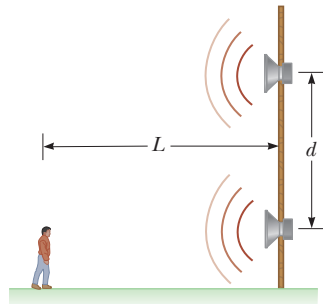


Figure P18.72

73. **Review.** Consider the apparatus shown in Figure 18.11 and described in Example 18.4. Suppose the number of antinodes in Figure 18.11b is an arbitrary value n . (a) Find an expression for the radius of the sphere in the water as a function of only n . (b) What is the minimum allowed value of n for a sphere of nonzero size? (c) What is the radius of the largest sphere that will produce a standing wave on the string? (d) What happens if a larger sphere is used?
74. **Review.** The top end of a yo-yo string is held stationary. The yo-yo itself is much more massive than the string. It starts from rest and moves down with constant acceleration 0.800 m/s² as it unwinds from the string. The rubbing of the string against the edge of the yo-yo excites transverse standing-wave vibrations in the string. Both ends of the string are nodes even as the length of the string increases. Consider the instant 1.20 s after the motion begins from rest. (a) Show that the rate of change with time of the wavelength of the fundamental mode of oscillation is 1.92 m/s. (b) **What if?** Is the rate of change of the wavelength of the second harmonic also 1.92 m/s

at this moment? Explain your answer. (c) **What if?** The experiment is repeated after more mass has been added to the yo-yo body. The mass distribution is kept the same so that the yo-yo still moves with downward acceleration 0.800 m/s². At the 1.20-s point in this case, is the rate of change of the fundamental wavelength of the string vibration still equal to 1.92 m/s? Explain. (d) Is the rate of change of the second harmonic wavelength the same as in part (b)? Explain.

75. On a marimba (Fig. P18.75), the wooden bar that sounds a tone when struck vibrates in a transverse standing wave having three antinodes and two nodes. The lowest-frequency note is 87.0 Hz, produced by a bar 40.0 cm long. (a) Find the speed of transverse waves on the bar. (b) A resonant pipe suspended vertically below the center of the bar enhances the loudness of the emitted sound. If the pipe is open at the top end only, what length of the pipe is required to resonate with the bar in part (a)?



© ArenaPal/Topham/The Image Works. Reproduced by permission.

Figure P18.75

76. A nylon string has mass 5.50 g and length $L = 86.0$ cm. The lower end is tied to the floor, and the upper end is tied to a small set of wheels through a slot in a track on which the wheels move (Fig. P18.76). The wheels have a mass that is negligible compared with that of the string, and they roll without friction on the track so that the upper end of the string is essentially free. At equilibrium, the string is vertical and motionless. When it is carrying a small-amplitude wave, you may assume the string is always under uniform tension 1.30 N. (a) Find the speed of transverse waves on the string. (b) The string's vibration possibilities are a set of standing-wave states, each with a node at the fixed bottom end and an antinode at the free top end. Find the node–antinode distances for each of the three simplest states. (c) Find the frequency of each of these states.

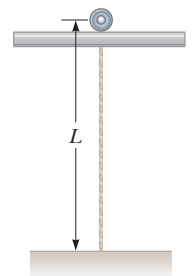


Figure P18.76

77. **M** Two train whistles have identical frequencies of 180 Hz. When one train is at rest in the station and the other is moving nearby, a commuter standing on the station platform hears beats with a frequency of 2.00 beats/s when the whistles operate together. What

are the two possible speeds and directions the moving train can have?

- 78. Review.** A loudspeaker at the front of a room and an identical loudspeaker at the rear of the room are being driven by the same oscillator at 456 Hz. A student walks at a uniform rate of 1.50 m/s along the length of the room. She hears a single tone repeatedly becoming louder and softer. (a) Model these variations as beats between the Doppler-shifted sounds the student receives. Calculate the number of beats the student hears each second. (b) Model the two speakers as producing a standing wave in the room and the student as walking between antinodes. Calculate the number of intensity maxima the student hears each second.

- 79. Review.** Consider the copper object hanging from the steel wire in Problem 32. The top end of the wire is fixed. When the wire is struck, it emits sound with a fundamental frequency of 300 Hz. The copper object is then submerged in water. If the object can be positioned with any desired fraction of its volume submerged, what is the lowest possible new fundamental frequency?

- 80. M** Two wires are welded together end to end. The wires are made of the same material, but the diameter of one is twice that of the other. They are subjected to a tension of 4.60 N. The thin wire has a length of 40.0 cm and a linear mass density of 2.00 g/m. The combination is fixed at both ends and vibrated in such a way that two antinodes are present, with the node between them being right at the weld. (a) What is the frequency of vibration? (b) What is the length of the thick wire?

- 81.** A string of linear density 1.60 g/m is stretched between clamps 48.0 cm apart. The string does not stretch appreciably as the tension in it is steadily raised from 15.0 N at $t = 0$ to 25.0 N at $t = 3.50$ s. Therefore, the tension as a function of time is given by the expression $T = 15.0 + 10.0t/3.50$, where T is in newtons and t is in seconds. The string is vibrating in its fundamental mode throughout this process. Find the number of oscillations it completes during the 3.50-s interval.

- 82.** A standing wave is set up in a string of variable length and tension by a vibrator of variable frequency. Both ends of the string are fixed. When the vibrator has a frequency f , in a string of length L and under tension T , n antinodes are set up in the string. (a) If the length of the string is doubled, by what factor should the frequency be changed so that the same number of antinodes is produced? (b) If the frequency and length are held constant, what tension will produce $n + 1$ antinodes? (c) If the frequency is tripled and the length of the string is halved, by what factor should the tension be changed so that twice as many antinodes are produced?

- 83.** Two waves are described by the wave functions

$$y_1(x, t) = 5.00 \sin(2.00x - 10.0t)$$

$$y_2(x, t) = 10.0 \cos(2.00x - 10.0t)$$

where x , y_1 , and y_2 are in meters and t is in seconds. (a) Show that the wave resulting from their superposition can be expressed as a single sine function.

(b) Determine the amplitude and phase angle for this sinusoidal wave.

- 84.** A flute is designed so that it produces a frequency of 261.6 Hz, middle C, when all the holes are covered and the temperature is 20.0°C. (a) Consider the flute as a pipe that is open at both ends. Find the length of the flute, assuming middle C is the fundamental. (b) A second player, nearby in a colder room, also attempts to play middle C on an identical flute. A beat frequency of 3.00 Hz is heard when both flutes are playing. What is the temperature of the second room?

- 85. Review.** A 12.0-kg object hangs in equilibrium from a string with a total length of $L = 5.00$ m and a linear mass density of $\mu = 0.00100$ kg/m. The string is wrapped around two light, frictionless pulleys that are separated by a distance of $d = 2.00$ m (Fig. P18.85a). (a) Determine the tension in the string. (b) At what frequency must the string between the pulleys vibrate to form the standing-wave pattern shown in Figure P18.85b?

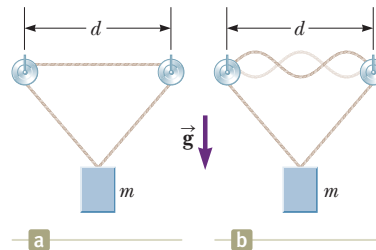


Figure P18.85 Problems 85 and 86.

- 86. Review.** An object of mass m hangs in equilibrium from a string with a total length L and a linear mass density μ . The string is wrapped around two light, frictionless pulleys that are separated by a distance d (Fig. P18.85a). (a) Determine the tension in the string. (b) At what frequency must the string between the pulleys vibrate to form the standing-wave pattern shown in Figure P18.85b?

Challenge Problems

- 87. Review.** Consider the apparatus shown in Figure P18.87a, where the hanging object has mass M and the string is vibrating in its second harmonic. The vibrating blade at the left maintains a constant frequency. The wind begins to blow to the right, applying a con-

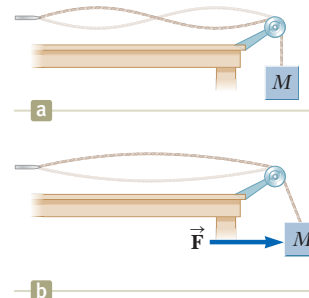


Figure P18.87

stant horizontal force \vec{F} on the hanging object. What is the magnitude of the force the wind must apply to the hanging object so that the string vibrates in its first harmonic as shown in Figure 18.87b?

88. In Figures 18.20a and 18.20b, notice that the amplitude of the component wave for frequency f is large, that for $3f$ is smaller, and that for $5f$ is smaller still. How do we know exactly how much amplitude to assign to each frequency component to build a square wave? This problem helps us find the answer to that question. Let the square wave in Figure 18.20c have an amplitude A and let $t = 0$ be at the extreme left of the figure. So, one period T of the square wave is described by

$$y(t) = \begin{cases} A & 0 < t < \frac{T}{2} \\ -A & \frac{T}{2} < t < T \end{cases}$$

Express Equation 18.13 with angular frequencies:

$$y(t) = \sum_n (A_n \sin n\omega t + B_n \cos n\omega t)$$

Now proceed as follows. (a) Multiply both sides of Equation 18.13 by $\sin m\omega t$ and integrate both sides over one period T . Show that the left-hand side of the resulting equation is equal to 0 if m is even and is equal to $4A/m\omega$ if m is odd. (b) Using trigonometric identities, show that all terms on the right-hand side involving B_n are equal to zero. (c) Using trigonometric identities, show that all terms on the right-hand side involving A_n are equal to zero *except* for the one case of $m = n$. (d) Show that the entire right-hand side of the equation reduces to $\frac{1}{2}A_m T$. (e) Show that the Fourier series expansion for a square wave is


$$y(t) = \sum_n \frac{4A}{n\pi} \sin n\omega t$$

Thermodynamics

PART

3

A bubble in one of the many mud pots in Yellowstone National Park is caught just at the moment of popping. A mud pot is a pool of bubbling hot mud that demonstrates the existence of thermodynamic processes below the Earth's surface. (© Adambooth/Dreamstime.com)



We now direct our attention to the study of thermodynamics, which involves situations in which the temperature or state (solid, liquid, gas) of a system changes due to energy transfers. As we shall see, thermodynamics is very successful in explaining the bulk properties of matter and the correlation between these properties and the mechanics of atoms and molecules.

Historically, the development of thermodynamics paralleled the development of the atomic theory of matter. By the 1820s, chemical experiments had provided solid evidence for the existence of atoms. At that time, scientists recognized that a connection between thermodynamics and the structure of matter must exist. In 1827, botanist Robert Brown reported that grains of pollen suspended in a liquid move erratically from one place to another as if under constant agitation. In 1905, Albert Einstein used kinetic theory to explain the cause of this erratic motion, known today as *Brownian motion*. Einstein explained this phenomenon by assuming the grains are under constant bombardment by “invisible” molecules in the liquid, which themselves move erratically. This explanation gave scientists insight into the concept of molecular motion and gave credence to the idea that matter is made up of atoms. A connection was thus forged between the everyday world and the tiny, invisible building blocks that make up this world.

Thermodynamics also addresses more practical questions. Have you ever wondered how a refrigerator is able to cool its contents, or what types of transformations occur in a power plant or in the engine of your automobile, or what happens to the kinetic energy of a moving object when the object comes to rest? The laws of thermodynamics can be used to provide explanations for these and other phenomena. ■

- 19.1 Temperature and the Zeroth Law of Thermodynamics
- 19.2 Thermometers and the Celsius Temperature Scale
- 19.3 The Constant-Volume Gas Thermometer and the Absolute Temperature Scale
- 19.4 Thermal Expansion of Solids and Liquids
- 19.5 Macroscopic Description of an Ideal Gas



Why would someone designing a pipeline include these strange loops? Pipelines carrying liquids often contain such loops to allow for expansion and contraction as the temperature changes. We will study thermal expansion in this chapter.

(© Lowell Georgia/CORBIS)

In our study of mechanics, we carefully defined such concepts as *mass*, *force*, and *kinetic energy* to facilitate our quantitative approach. Likewise, a quantitative description of thermal phenomena requires careful definitions of such important terms as *temperature*, *heat*, and *internal energy*. This chapter begins with a discussion of temperature.

Next, when studying thermal phenomena, we consider the importance of the particular substance we are investigating. For example, gases expand appreciably when heated, whereas liquids and solids expand only slightly.

This chapter concludes with a study of ideal gases on the macroscopic scale. Here, we are concerned with the relationships among such quantities as pressure, volume, and temperature of a gas. In Chapter 21, we shall examine gases on a microscopic scale, using a model that represents the components of a gas as small particles.

19.1 Temperature and the Zeroth Law of Thermodynamics

We often associate the concept of temperature with how hot or cold an object feels when we touch it. In this way, our senses provide us with a qualitative indication of temperature. Our senses, however, are unreliable and often mislead us. For exam-

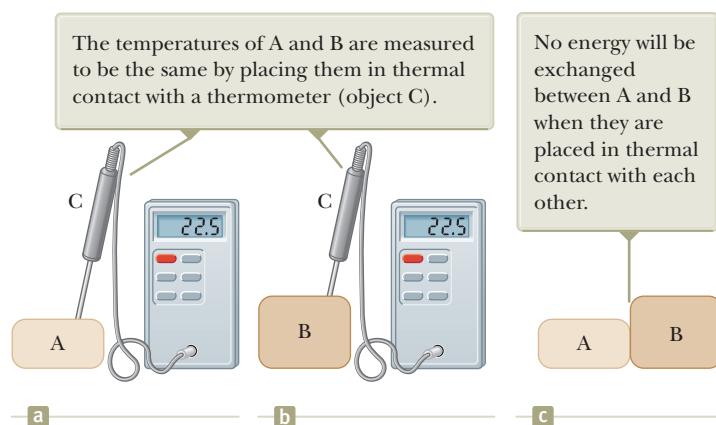


Figure 19.1 The zeroth law of thermodynamics.

ple, if you stand in bare feet with one foot on carpet and the other on an adjacent tile floor, the tile feels colder than the carpet *even though both are at the same temperature*. The two objects feel different because tile transfers energy by heat at a higher rate than carpet does. Your skin “measures” the rate of energy transfer by heat rather than the actual temperature. What we need is a reliable and reproducible method for measuring the relative hotness or coldness of objects rather than the rate of energy transfer. Scientists have developed a variety of thermometers for making such quantitative measurements.

Two objects at different initial temperatures eventually reach some intermediate temperature when placed in contact with each other. For example, when hot water and cold water are mixed in a bathtub, energy is transferred from the hot water to the cold water and the final temperature of the mixture is somewhere between the initial hot and cold temperatures.

Imagine that two objects are placed in an insulated container such that they interact with each other but not with the environment. If the objects are at different temperatures, energy is transferred between them, even if they are initially not in physical contact with each other. The energy-transfer mechanisms from Chapter 8 that we will focus on are heat and electromagnetic radiation. For purposes of this discussion, let’s assume two objects are in **thermal contact** with each other if energy can be exchanged between them by these processes due to a temperature difference. **Thermal equilibrium** is a situation in which two objects would not exchange energy by heat or electromagnetic radiation if they were placed in thermal contact.

Let’s consider two objects A and B, which are not in thermal contact, and a third object C, which is our thermometer. We wish to determine whether A and B are in thermal equilibrium with each other. The thermometer (object C) is first placed in thermal contact with object A until thermal equilibrium is reached¹ as shown in Figure 19.1a. From that moment on, the thermometer’s reading remains constant and we record this reading. The thermometer is then removed from object A and placed in thermal contact with object B as shown in Figure 19.1b. The reading is again recorded after thermal equilibrium is reached. If the two readings are the same, we can conclude that object A and object B are in thermal equilibrium with each other. If they are placed in contact with each other as in Figure 19.1c, there is no exchange of energy between them.

¹We assume a negligible amount of energy transfers between the thermometer and object A in the time interval during which they are in thermal contact. Without this assumption, which is also made for the thermometer and object B, the measurement of the temperature of an object disturbs the system so that the measured temperature is different from the initial temperature of the object. In practice, whenever you measure a temperature with a thermometer, you measure the disturbed system, not the original system.

We can summarize these results in a statement known as the **zeroth law of thermodynamics** (the law of equilibrium):

Zeroth law of thermodynamics ▶

If objects A and B are separately in thermal equilibrium with a third object C, then A and B are in thermal equilibrium with each other.

This statement can easily be proved experimentally and is very important because it enables us to define temperature. We can think of **temperature** as the property that determines whether an object is in thermal equilibrium with other objects. Two objects in thermal equilibrium with each other are at the same temperature. Conversely, if two objects have different temperatures, they are not in thermal equilibrium with each other. We now know that temperature is something that determines whether or not energy will transfer between two objects in thermal contact. In Chapter 21, we will relate temperature to the mechanical behavior of molecules.

Quick Quiz 19.1 Two objects, with different sizes, masses, and temperatures, are placed in thermal contact. In which direction does the energy travel? **(a)** Energy travels from the larger object to the smaller object. **(b)** Energy travels from the object with more mass to the one with less mass. **(c)** Energy travels from the object at higher temperature to the object at lower temperature.

19.2 Thermometers and the Celsius Temperature Scale

Thermometers are devices used to measure the temperature of a system. All thermometers are based on the principle that some physical property of a system changes as the system's temperature changes. Some physical properties that change with temperature are (1) the volume of a liquid, (2) the dimensions of a solid, (3) the pressure of a gas at constant volume, (4) the volume of a gas at constant pressure, (5) the electric resistance of a conductor, and (6) the color of an object.

A common thermometer in everyday use consists of a mass of liquid—usually mercury or alcohol—that expands into a glass capillary tube when heated (Fig. 19.2). In this case, the physical property that changes is the volume of a liquid. Any temperature change in the range of the thermometer can be defined as being proportional to the change in length of the liquid column. The thermometer can be calibrated by placing it in thermal contact with a natural system that remains

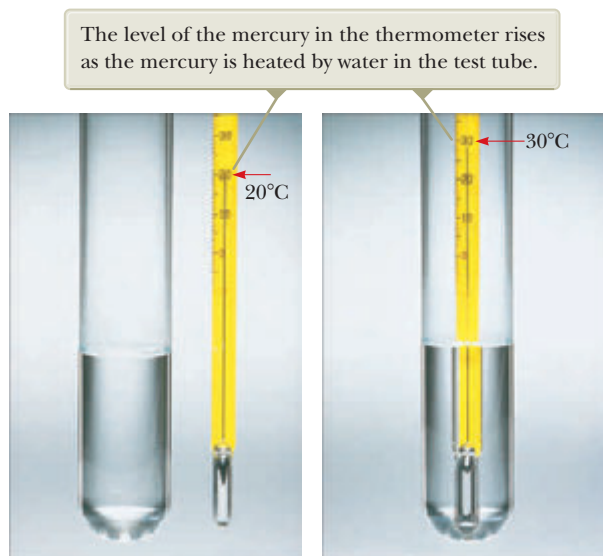


Figure 19.2 A mercury thermometer before and after increasing its temperature.

at constant temperature. One such system is a mixture of water and ice in thermal equilibrium at atmospheric pressure. On the **Celsius temperature scale**, this mixture is defined to have a temperature of zero degrees Celsius, which is written as 0°C ; this temperature is called the *ice point* of water. Another commonly used system is a mixture of water and steam in thermal equilibrium at atmospheric pressure; its temperature is defined as 100°C , which is the *steam point* of water. Once the liquid levels in the thermometer have been established at these two points, the length of the liquid column between the two points is divided into 100 equal segments to create the Celsius scale. Therefore, each segment denotes a change in temperature of one Celsius degree.

Thermometers calibrated in this way present problems when extremely accurate readings are needed. For instance, the readings given by an alcohol thermometer calibrated at the ice and steam points of water might agree with those given by a mercury thermometer only at the calibration points. Because mercury and alcohol have different thermal expansion properties, when one thermometer reads a temperature of, for example, 50°C , the other may indicate a slightly different value. The discrepancies between thermometers are especially large when the temperatures to be measured are far from the calibration points.²

An additional practical problem of any thermometer is the limited range of temperatures over which it can be used. A mercury thermometer, for example, cannot be used below the freezing point of mercury, which is -39°C , and an alcohol thermometer is not useful for measuring temperatures above 85°C , the boiling point of alcohol. To surmount this problem, we need a universal thermometer whose readings are independent of the substance used in it. The gas thermometer, discussed in the next section, approaches this requirement.

19.3 The Constant-Volume Gas Thermometer and the Absolute Temperature Scale

One version of a gas thermometer is the constant-volume apparatus shown in Figure 19.3. The physical change exploited in this device is the variation of pressure of a fixed volume of gas with temperature. The flask is immersed in an ice-water bath, and mercury reservoir *B* is raised or lowered until the top of the mercury in column *A* is at the zero point on the scale. The height *h*, the difference between the mercury levels in reservoir *B* and column *A*, indicates the pressure in the flask at 0°C by means of Equation 14.4, $P = P_0 + \rho gh$.

The flask is then immersed in water at the steam point. Reservoir *B* is readjusted until the top of the mercury in column *A* is again at zero on the scale, which ensures that the gas's volume is the same as it was when the flask was in the ice bath (hence the designation "constant-volume"). This adjustment of reservoir *B* gives a value for the gas pressure at 100°C . These two pressure and temperature values are then plotted as shown in Figure 19.4. The line connecting the two points serves as a calibration curve for unknown temperatures. (Other experiments show that a linear relationship between pressure and temperature is a very good assumption.) To measure the temperature of a substance, the gas flask of Figure 19.3 is placed in thermal contact with the substance and the height of reservoir *B* is adjusted until the top of the mercury column in *A* is at zero on the scale. The height of the mercury column in *B* indicates the pressure of the gas; knowing the pressure, the temperature of the substance is found using the graph in Figure 19.4.

Now suppose temperatures of different gases at different initial pressures are measured with gas thermometers. Experiments show that the thermometer readings are nearly independent of the type of gas used as long as the gas pressure is low and the temperature is well above the point at which the gas liquefies

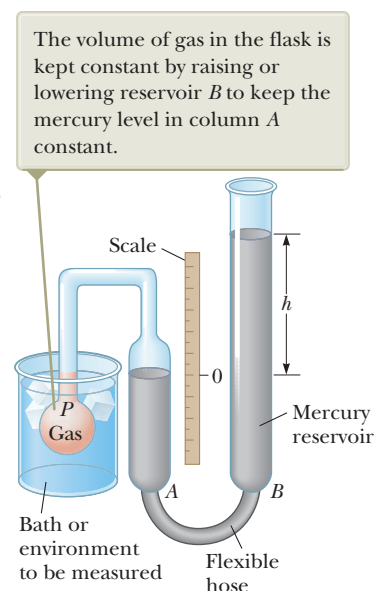


Figure 19.3 A constant-volume gas thermometer measures the pressure of the gas contained in the flask immersed in the bath.

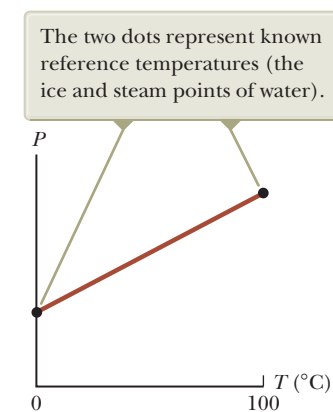


Figure 19.4 A typical graph of pressure versus temperature taken with a constant-volume gas thermometer.

²Two thermometers that use the same liquid may also give different readings, due in part to difficulties in constructing uniform-bore glass capillary tubes.

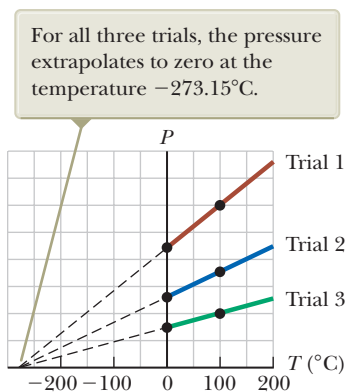


Figure 19.5 Pressure versus temperature for experimental trials in which gases have different pressures in a constant-volume gas thermometer.

Pitfall Prevention 19.1

A Matter of Degree Notations for temperatures in the Kelvin scale do not use the degree sign. The unit for a Kelvin temperature is simply “kelvins” and not “degrees Kelvin.”

Note that the scale is logarithmic.

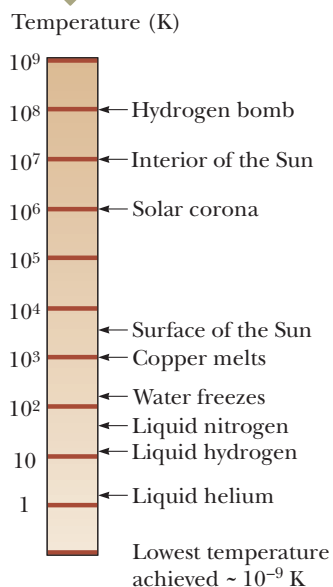


Figure 19.6 Absolute temperatures at which various physical processes occur.

(Fig. 19.5). The agreement among thermometers using various gases improves as the pressure is reduced.

If we extend the straight lines in Figure 19.5 toward negative temperatures, we find a remarkable result: **in every case, the pressure is zero when the temperature is -273.15°C !** This finding suggests some special role that this particular temperature must play. It is used as the basis for the **absolute temperature scale**, which sets -273.15°C as its zero point. This temperature is often referred to as **absolute zero**. It is indicated as a zero because at a lower temperature, the pressure of the gas would become negative, which is meaningless. The size of one degree on the absolute temperature scale is chosen to be identical to the size of one degree on the Celsius scale. Therefore, the conversion between these temperatures is

$$T_C = T - 273.15 \quad (19.1)$$

where T_C is the Celsius temperature and T is the absolute temperature.

Because the ice and steam points are experimentally difficult to duplicate and depend on atmospheric pressure, an absolute temperature scale based on two new fixed points was adopted in 1954 by the International Committee on Weights and Measures. The first point is absolute zero. The second reference temperature for this new scale was chosen as the **triple point of water**, which is the single combination of temperature and pressure at which liquid water, gaseous water, and ice (solid water) coexist in equilibrium. This triple point occurs at a temperature of 0.01°C and a pressure of 4.58 mm of mercury. On the new scale, which uses the unit *kelvin*, the temperature of water at the triple point was set at 273.16 kelvins, abbreviated 273.16 K. This choice was made so that the old absolute temperature scale based on the ice and steam points would agree closely with the new scale based on the triple point. This new absolute temperature scale (also called the **Kelvin scale**) employs the SI unit of absolute temperature, the **kelvin**, which is defined to be $1/273.16$ of the difference between absolute zero and the temperature of the triple point of water.

Figure 19.6 gives the absolute temperature for various physical processes and structures. The temperature of absolute zero (0 K) cannot be achieved, although laboratory experiments have come very close, reaching temperatures of less than one nanokelvin.

The Celsius, Fahrenheit, and Kelvin Temperature Scales³

Equation 19.1 shows that the Celsius temperature T_C is shifted from the absolute (Kelvin) temperature T by 273.15° . Because the size of one degree is the same on the two scales, a temperature difference of 5°C is equal to a temperature difference of 5 K. The two scales differ only in the choice of the zero point. Therefore, the ice-point temperature on the Kelvin scale, 273.15 K, corresponds to 0.00°C , and the Kelvin-scale steam point, 373.15 K, is equivalent to 100.00°C .

A common temperature scale in everyday use in the United States is the **Fahrenheit scale**. This scale sets the temperature of the ice point at 32°F and the temperature of the steam point at 212°F . The relationship between the Celsius and Fahrenheit temperature scales is

$$T_F = \frac{9}{5}T_C + 32^\circ\text{F} \quad (19.2)$$

We can use Equations 19.1 and 19.2 to find a relationship between changes in temperature on the Celsius, Kelvin, and Fahrenheit scales:

$$\Delta T_C = \Delta T = \frac{5}{9}\Delta T_F \quad (19.3)$$

Of these three temperature scales, only the Kelvin scale is based on a true zero value of temperature. The Celsius and Fahrenheit scales are based on an arbitrary zero associated with one particular substance, water, on one particular planet, the

³Named after Anders Celsius (1701–1744), Daniel Gabriel Fahrenheit (1686–1736), and William Thomson, Lord Kelvin (1824–1907), respectively.

Earth. Therefore, if you encounter an equation that calls for a temperature T or that involves a ratio of temperatures, you *must* convert all temperatures to kelvins. If the equation contains a change in temperature ΔT , using Celsius temperatures will give you the correct answer, in light of Equation 19.3, but it is always *safest* to convert temperatures to the Kelvin scale.

- Quick Quiz 19.2** Consider the following pairs of materials. Which pair represents two materials, one of which is twice as hot as the other? (a) boiling water at 100°C , a glass of water at 50°C (b) boiling water at 100°C , frozen methane at -50°C (c) an ice cube at -20°C , flames from a circus fire-eater at 233°C
- (d) none of those pairs

Example 19.1 Converting Temperatures

On a day when the temperature reaches 50°F , what is the temperature in degrees Celsius and in kelvins?

SOLUTION

Conceptualize In the United States, a temperature of 50°F is well understood. In many other parts of the world, however, this temperature might be meaningless because people are familiar with the Celsius temperature scale.

Categorize This example is a simple substitution problem.

Solve Equation 19.2 for the Celsius temperature and substitute numerical values:

$$T_C = \frac{5}{9}(T_F - 32) = \frac{5}{9}(50 - 32) = 10^\circ\text{C}$$

Use Equation 19.1 to find the Kelvin temperature:

$$T = T_C + 273.15 = 10^\circ\text{C} + 273.15 = 283\text{ K}$$

A convenient set of weather-related temperature equivalents to keep in mind is that 0°C is (literally) freezing at 32°F , 10°C is cool at 50°F , 20°C is room temperature, 30°C is warm at 86°F , and 40°C is a hot day at 104°F .

19.4 Thermal Expansion of Solids and Liquids

Our discussion of the liquid thermometer makes use of one of the best-known changes in a substance: as its temperature increases, its volume increases. This phenomenon, known as **thermal expansion**, plays an important role in numerous engineering applications. For example, thermal-expansion joints such as those shown in Figure 19.7 must be included in buildings, concrete highways, railroad tracks,

Without these joints to separate sections of roadway on bridges, the surface would buckle due to thermal expansion on very hot days or crack due to contraction on very cold days.



a

The long, vertical joint is filled with a soft material that allows the wall to expand and contract as the temperature of the bricks changes.



b

Figure 19.7 Thermal-expansion joints in (a) bridges and (b) walls.

brick walls, and bridges to compensate for dimensional changes that occur as the temperature changes.

Thermal expansion is a consequence of the change in the *average* separation between the atoms in an object. To understand this concept, let's model the atoms as being connected by stiff springs as discussed in Section 15.3 and shown in Figure 15.11b. At ordinary temperatures, the atoms in a solid oscillate about their equilibrium positions with an amplitude of approximately 10^{-11} m and a frequency of approximately 10^{13} Hz. The average spacing between the atoms is about 10^{-10} m. As the temperature of the solid increases, the atoms oscillate with greater amplitudes; as a result, the average separation between them increases.⁴ Consequently, the object expands.

If thermal expansion is sufficiently small relative to an object's initial dimensions, the change in any dimension is, to a good approximation, proportional to the first power of the temperature change. Suppose an object has an initial length L_i along some direction at some temperature and the length changes by an amount ΔL for a change in temperature ΔT . Because it is convenient to consider the fractional change in length per degree of temperature change, we define the **average coefficient of linear expansion** as

$$\alpha \equiv \frac{\Delta L/L_i}{\Delta T}$$

Experiments show that α is constant for small changes in temperature. For purposes of calculation, this equation is usually rewritten as

$$\Delta L = \alpha L_i \Delta T \quad (19.4)$$

or as

$$L_f - L_i = \alpha L_i (T_f - T_i) \quad (19.5)$$

where L_f is the final length, T_i and T_f are the initial and final temperatures, respectively, and the proportionality constant α is the average coefficient of linear expansion for a given material and has units of $(^\circ\text{C})^{-1}$. Equation 19.4 can be used for both thermal expansion, when the temperature of the material increases, and thermal contraction, when its temperature decreases.

It may be helpful to think of thermal expansion as an effective magnification or as a photographic enlargement of an object. For example, as a metal washer is heated (Fig. 19.8), all dimensions, including the radius of the hole, increase according to Equation 19.4. A cavity in a piece of material expands in the same way as if the cavity were filled with the material.

Table 19.1 lists the average coefficients of linear expansion for various materials. For these materials, α is positive, indicating an increase in length with increasing temperature. That is not always the case, however. Some substances—calcite (CaCO_3) is one example—expand along one dimension (positive α) and contract along another (negative α) as their temperatures are increased.

Because the linear dimensions of an object change with temperature, it follows that surface area and volume change as well. The change in volume is proportional to the initial volume V_i and to the change in temperature according to the relationship

$$\Delta V = \beta V_i \Delta T \quad (19.6)$$

where β is the **average coefficient of volume expansion**. To find the relationship between β and α , assume the average coefficient of linear expansion of the solid is the same in all directions; that is, assume the material is *isotropic*. Consider a solid box of dimensions ℓ , w , and h . Its volume at some temperature T_i is $V_i = \ell wh$. If the

Thermal expansion
in one dimension

Pitfall Prevention 19.2

Do Holes Become Larger or Smaller? When an object's temperature is raised, every linear dimension increases in size. That includes any holes in the material, which expand in the same way as if the hole were filled with the material as shown in Figure 19.8.

Thermal expansion
in three dimensions

⁴More precisely, thermal expansion arises from the *asymmetrical* nature of the potential energy curve for the atoms in a solid as shown in Figure 15.11a. If the oscillators were truly harmonic, the average atomic separations would not change regardless of the amplitude of vibration.

Table 19.1 Average Expansion Coefficients for Some Materials Near Room Temperature

Material (Solids)	Average Linear Expansion Coefficient (α)($^{\circ}\text{C}^{-1}$)	Material (Liquids and Gases)	Average Volume Expansion Coefficient (β)($^{\circ}\text{C}^{-1}$)
Aluminum	24×10^{-6}	Acetone	1.5×10^{-4}
Brass and bronze	19×10^{-6}	Alcohol, ethyl	1.12×10^{-4}
Concrete	12×10^{-6}	Benzene	1.24×10^{-4}
Copper	17×10^{-6}	Gasoline	9.6×10^{-4}
Glass (ordinary)	9×10^{-6}	Glycerin	4.85×10^{-4}
Glass (Pyrex)	3.2×10^{-6}	Mercury	1.82×10^{-4}
Invar (Ni-Fe alloy)	0.9×10^{-6}	Turpentine	9.0×10^{-4}
Lead	29×10^{-6}	Air ^a at 0°C	3.67×10^{-3}
Steel	11×10^{-6}	Helium ^a	3.665×10^{-3}

^aGases do not have a specific value for the volume expansion coefficient because the amount of expansion depends on the type of process through which the gas is taken. The values given here assume the gas undergoes an expansion at constant pressure.

temperature changes to $T_i + \Delta T$, its volume changes to $V_i + \Delta V$, where each dimension changes according to Equation 19.4. Therefore,

$$\begin{aligned} V_i + \Delta V &= (\ell + \Delta\ell)(w + \Delta w)(h + \Delta h) \\ &= (\ell + \alpha\ell \Delta T)(w + \alpha w \Delta T)(h + \alpha h \Delta T) \\ &= \ell wh(1 + \alpha \Delta T)^3 \\ &= V_i[1 + 3\alpha \Delta T + 3(\alpha \Delta T)^2 + (\alpha \Delta T)^3] \end{aligned}$$

Dividing both sides by V_i and isolating the term $\Delta V/V_i$, we obtain the fractional change in volume:

$$\frac{\Delta V}{V_i} = 3\alpha \Delta T + 3(\alpha \Delta T)^2 + (\alpha \Delta T)^3$$

Because $\alpha \Delta T \ll 1$ for typical values of ΔT ($< \sim 100^{\circ}\text{C}$), we can neglect the terms $3(\alpha \Delta T)^2$ and $(\alpha \Delta T)^3$. Upon making this approximation, we see that

$$\frac{\Delta V}{V_i} = 3\alpha \Delta T \rightarrow \Delta V = (3\alpha)V_i \Delta T$$

Comparing this expression to Equation 19.6 shows that

$$\beta = 3\alpha$$

In a similar way, you can show that the change in area of a rectangular plate is given by $\Delta A = 2\alpha A_i \Delta T$ (see Problem 61).

A simple mechanism called a *bimetallic strip*, found in practical devices such as mechanical thermostats, uses the difference in coefficients of expansion for different materials. It consists of two thin strips of dissimilar metals bonded together. As the temperature of the strip increases, the two metals expand by different amounts and the strip bends as shown in Figure 19.9.

Quick Quiz 19.3 If you are asked to make a very sensitive glass thermometer, which of the following working liquids would you choose? (a) mercury (b) alcohol (c) gasoline (d) glycerin

Quick Quiz 19.4 Two spheres are made of the same metal and have the same radius, but one is hollow and the other is solid. The spheres are taken through the same temperature increase. Which sphere expands more? (a) The solid sphere expands more. (b) The hollow sphere expands more. (c) They expand by the same amount. (d) There is not enough information to say.

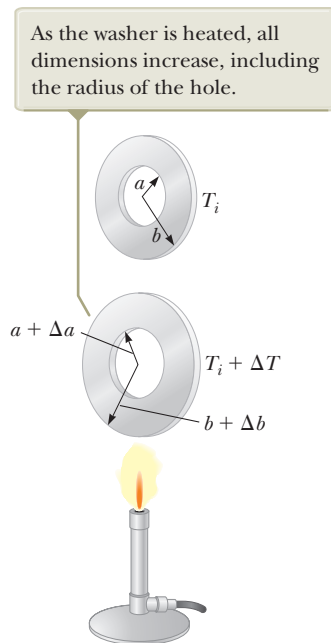


Figure 19.8 Thermal expansion of a homogeneous metal washer. (The expansion is exaggerated in this figure.)

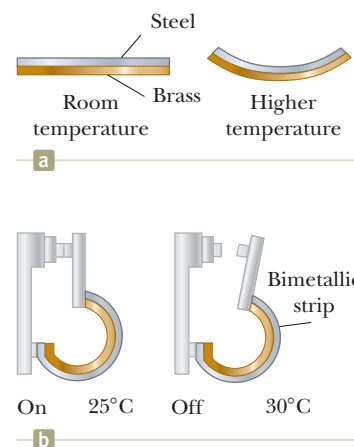


Figure 19.9 (a) A bimetallic strip bends as the temperature changes because the two metals have different expansion coefficients. (b) A bimetallic strip used in a thermostat to break or make electrical contact.

Example 19.2 Expansion of a Railroad Track

A segment of steel railroad track has a length of 30.000 m when the temperature is 0.0°C.

(A) What is its length when the temperature is 40.0°C?

SOLUTION

Conceptualize Because the rail is relatively long, we expect to obtain a measurable increase in length for a 40°C temperature increase.

Categorize We will evaluate a length increase using the discussion of this section, so this part of the example is a substitution problem.

Use Equation 19.4 and the value of the coefficient of linear expansion from Table 19.1:

$$\Delta L = \alpha L_i \Delta T = [11 \times 10^{-6} (\text{°C})^{-1}](30.000 \text{ m})(40.0\text{°C}) = 0.013 \text{ m}$$

Find the new length of the track:

$$L_f = 30.000 \text{ m} + 0.013 \text{ m} = 30.013 \text{ m}$$

(B) Suppose the ends of the rail are rigidly clamped at 0.0°C so that expansion is prevented. What is the thermal stress set up in the rail if its temperature is raised to 40.0°C?

SOLUTION

Categorize This part of the example is an analysis problem because we need to use concepts from another chapter.

Analyze The thermal stress is the same as the tensile stress in the situation in which the rail expands freely and is then compressed with a mechanical force F back to its original length.

Find the tensile stress from Equation 12.6 using Young's modulus for steel from Table 12.1:

$$\text{Tensile stress} = \frac{F}{A} = Y \frac{\Delta L}{L_i}$$

$$\frac{F}{A} = (20 \times 10^{10} \text{ N/m}^2) \left(\frac{0.013 \text{ m}}{30.000 \text{ m}} \right) = 8.7 \times 10^7 \text{ N/m}^2$$

Finalize The expansion in part (A) is 1.3 cm. This expansion is indeed measurable as predicted in the Conceptualize step. The thermal stress in part (B) can be avoided by leaving small expansion gaps between the rails.

WHAT IF? What if the temperature drops to -40.0°C? What is the length of the unclamped segment?

Answer The expression for the change in length in Equation 19.4 is the same whether the temperature increases or decreases. Therefore, if there is an increase in length of 0.013 m when the temperature increases by 40°C, there is a decrease in length of 0.013 m when the temperature decreases by 40°C. (We assume α is constant over the entire range of temperatures.) The new length at the colder temperature is 30.000 m - 0.013 m = 29.987 m.

Example 19.3 The Thermal Electrical Short

A poorly designed electronic device has two bolts attached to different parts of the device that almost touch each other in its interior as in Figure 19.10. The steel and brass bolts are at different electric potentials, and if they touch, a short circuit will develop, damaging the device. (We will study electric potential in Chapter 25.) The initial gap between the ends of the bolts is $d = 5.0 \mu\text{m}$ at 27°C. At what temperature will the bolts touch? Assume the distance between the walls of the device is not affected by the temperature change.

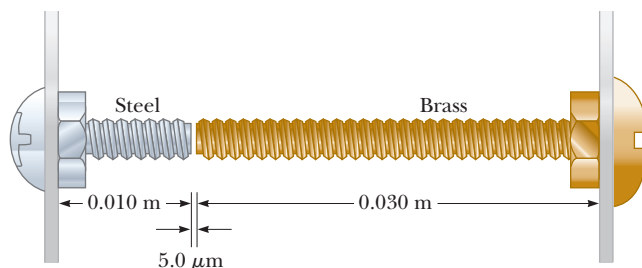


Figure 19.10 (Example 19.3) Two bolts attached to different parts of an electrical device are almost touching when the temperature is 27°C. As the temperature increases, the ends of the bolts move toward each other.

SOLUTION

Conceptualize Imagine the ends of both bolts expanding into the gap between them as the temperature rises.

19.3 continued

Categorize We categorize this example as a thermal expansion problem in which the *sum* of the changes in length of the two bolts must equal the length of the initial gap between the ends.

Analyze Set the sum of the length changes equal to the width of the gap:

$$\Delta L_{\text{br}} + \Delta L_{\text{st}} = \alpha_{\text{br}} L_{i,\text{br}} \Delta T + \alpha_{\text{st}} L_{i,\text{st}} \Delta T = d$$

Solve for ΔT :

$$\Delta T = \frac{d}{\alpha_{\text{br}} L_{i,\text{br}} + \alpha_{\text{st}} L_{i,\text{st}}}$$

Substitute numerical values:

$$\Delta T = \frac{5.0 \times 10^{-6} \text{ m}}{[19 \times 10^{-6} (\text{°C})^{-1}](0.030 \text{ m}) + [11 \times 10^{-6} (\text{°C})^{-1}](0.010 \text{ m})} = 7.4\text{°C}$$

Find the temperature at which the bolts touch:

$$T = 27\text{°C} + 7.4\text{°C} = 34\text{°C}$$

Finalize This temperature is possible if the air conditioning in the building housing the device fails for a long period on a very hot summer day.

The Unusual Behavior of Water

Liquids generally increase in volume with increasing temperature and have average coefficients of volume expansion about ten times greater than those of solids. Cold water is an exception to this rule as you can see from its density-versus-temperature curve shown in Figure 19.11. As the temperature increases from 0°C to 4°C, water contracts and its density therefore increases. Above 4°C, water expands with increasing temperature and so its density decreases. Therefore, the density of water reaches a maximum value of 1.000 g/cm³ at 4°C.

We can use this unusual thermal-expansion behavior of water to explain why a pond begins freezing at the surface rather than at the bottom. When the air temperature drops from, for example, 7°C to 6°C, the surface water also cools and consequently decreases in volume. The surface water is denser than the water below it, which has not cooled and decreased in volume. As a result, the surface water sinks, and warmer water from below moves to the surface. When the air temperature is between 4°C and 0°C, however, the surface water expands as it cools, becoming less dense than the water below it. The mixing process stops, and eventually the surface water freezes. As the water freezes, the ice remains on the surface because ice is less dense than water. The ice continues to build up at the surface, while water near the

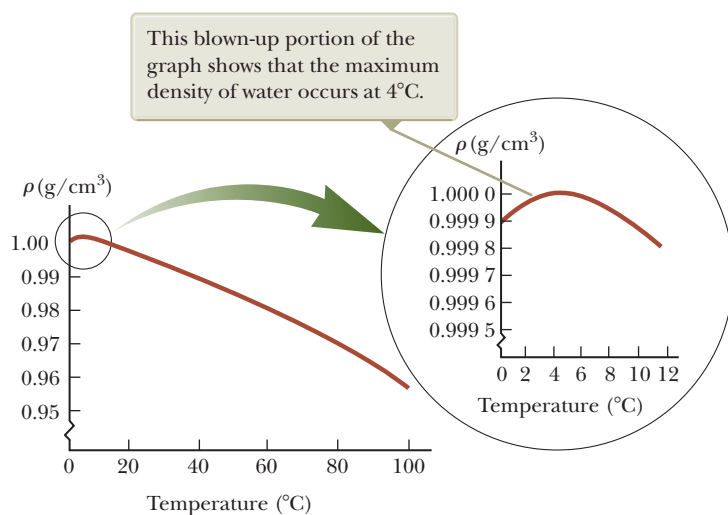


Figure 19.11 The variation in the density of water at atmospheric pressure with temperature.

bottom remains at 4°C. If that were not the case, fish and other forms of marine life would not survive.

19.5 Macroscopic Description of an Ideal Gas

The volume expansion equation $\Delta V = \beta V_i \Delta T$ is based on the assumption that the material has an initial volume V_i before the temperature change occurs. Such is the case for solids and liquids because they have a fixed volume at a given temperature.

The case for gases is completely different. The interatomic forces within gases are very weak, and, in many cases, we can imagine these forces to be nonexistent and still make very good approximations. Therefore, *there is no equilibrium separation* for the atoms and no “standard” volume at a given temperature; the volume depends on the size of the container. As a result, we cannot express changes in volume ΔV in a process on a gas with Equation 19.6 because we have no defined volume V_i at the beginning of the process. Equations involving gases contain the volume V , rather than a *change* in the volume from an initial value, as a variable.

For a gas, it is useful to know how the quantities volume V , pressure P , and temperature T are related for a sample of gas of mass m . In general, the equation that interrelates these quantities, called the *equation of state*, is very complicated. If the gas is maintained at a very low pressure (or low density), however, the equation of state is quite simple and can be determined from experimental results. Such a low-density gas is commonly referred to as an **ideal gas**.⁵ We can use the **ideal gas model** to make predictions that are adequate to describe the behavior of real gases at low pressures.

It is convenient to express the amount of gas in a given volume in terms of the number of moles n . One **mole** of any substance is that amount of the substance that contains **Avogadro’s number** $N_A = 6.022 \times 10^{23}$ of constituent particles (atoms or molecules). The number of moles n of a substance is related to its mass m through the expression

$$n = \frac{m}{M} \quad (19.7)$$

where M is the molar mass of the substance. The molar mass of each chemical element is the atomic mass (from the periodic table; see Appendix C) expressed in grams per mole. For example, the mass of one He atom is 4.00 u (atomic mass units), so the molar mass of He is 4.00 g/mol.

Now suppose an ideal gas is confined to a cylindrical container whose volume can be varied by means of a movable piston as in Figure 19.12. If we assume the cylinder does not leak, the mass (or the number of moles) of the gas remains constant. For such a system, experiments provide the following information:

- When the gas is kept at a constant temperature, its pressure is inversely proportional to the volume. (This behavior is described historically as Boyle’s law.)
- When the pressure of the gas is kept constant, the volume is directly proportional to the temperature. (This behavior is described historically as Charles’s law.)
- When the volume of the gas is kept constant, the pressure is directly proportional to the temperature. (This behavior is described historically as Gay–Lussac’s law.)

These observations are summarized by the **equation of state for an ideal gas**:

$$PV = nRT \quad (19.8)$$

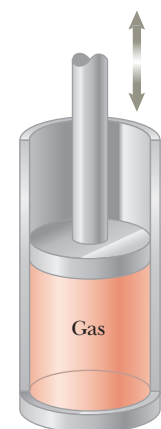


Figure 19.12 An ideal gas confined to a cylinder whose volume can be varied by means of a movable piston.

Equation of state for
an ideal gas ▶

⁵To be more specific, the assumptions here are that the temperature of the gas must not be too low (the gas must not condense into a liquid) or too high and that the pressure must be low. The concept of an ideal gas implies that the gas molecules do not interact except upon collision and that the molecular volume is negligible compared with the volume of the container. In reality, an ideal gas does not exist. The concept of an ideal gas is nonetheless very useful because real gases at low pressures are well-modeled as ideal gases.

In this expression, also known as the **ideal gas law**, n is the number of moles of gas in the sample and R is a constant. Experiments on numerous gases show that as the pressure approaches zero, the quantity PV/nT approaches the same value R for all gases. For this reason, R is called the **universal gas constant**. In SI units, in which pressure is expressed in pascals ($1 \text{ Pa} = 1 \text{ N/m}^2$) and volume in cubic meters, the product PV has units of newton \cdot meters, or joules, and R has the value

$$R = 8.314 \text{ J/mol} \cdot \text{K} \quad (19.9)$$

If the pressure is expressed in atmospheres and the volume in liters ($1 \text{ L} = 10^3 \text{ cm}^3 = 10^{-3} \text{ m}^3$), then R has the value

$$R = 0.08206 \text{ L} \cdot \text{atm/mol} \cdot \text{K}$$

Using this value of R and Equation 19.8 shows that the volume occupied by 1 mol of *any* gas at atmospheric pressure and at 0°C (273 K) is 22.4 L.

The ideal gas law states that if the volume and temperature of a fixed amount of gas do not change, the pressure also remains constant. Consider a bottle of champagne that is shaken and then spews liquid when opened as shown in Figure 19.13. A common misconception is that the pressure inside the bottle is increased when the bottle is shaken. On the contrary, because the temperature of the bottle and its contents remains constant as long as the bottle is sealed, so does the pressure, as can be shown by replacing the cork with a pressure gauge. The correct explanation is as follows. Carbon dioxide gas resides in the volume between the liquid surface and the cork. The pressure of the gas in this volume is set higher than atmospheric pressure in the bottling process. Shaking the bottle displaces some of the carbon dioxide gas into the liquid, where it forms bubbles, and these bubbles become attached to the inside of the bottle. (No new gas is generated by shaking.) When the bottle is opened, the pressure is reduced to atmospheric pressure, which causes the volume of the bubbles to increase suddenly. If the bubbles are attached to the bottle (beneath the liquid surface), their rapid expansion expels liquid from the bottle. If the sides and bottom of the bottle are first tapped until no bubbles remain beneath the surface, however, the drop in pressure does not force liquid from the bottle when the champagne is opened.

The ideal gas law is often expressed in terms of the total number of molecules N . Because the number of moles n equals the ratio of the total number of molecules and Avogadro's number N_A , we can write Equation 19.8 as

$$PV = nRT = \frac{N}{N_A} RT$$

$$PV = Nk_B T \quad (19.10)$$

where k_B is **Boltzmann's constant**, which has the value

$$k_B = \frac{R}{N_A} = 1.38 \times 10^{-23} \text{ J/K} \quad (19.11)$$

It is common to call quantities such as P , V , and T the **thermodynamic variables** of an ideal gas. If the equation of state is known, one of the variables can always be expressed as some function of the other two.

Quick Quiz 19.5 A common material for cushioning objects in packages is made by trapping bubbles of air between sheets of plastic. Is this material more effective at keeping the contents of the package from moving around inside the package on (a) a hot day, (b) a cold day, or (c) either hot or cold days?

Quick Quiz 19.6 On a winter day, you turn on your furnace and the temperature of the air inside your home increases. Assume your home has the normal amount of leakage between inside air and outside air. Is the number of moles of air in your room at the higher temperature (a) larger than before, (b) smaller than before, or (c) the same as before?



Figure 19.13 A bottle of champagne is shaken and opened. Liquid spews out of the opening. A common misconception is that the pressure inside the bottle is increased by the shaking.

Pitfall Prevention 19.3

So Many ks There are a variety of physical quantities for which the letter k is used. Two we have seen previously are the force constant for a spring (Chapter 15) and the wave number for a mechanical wave (Chapter 16). Boltzmann's constant is another k , and we will see k used for thermal conductivity in Chapter 20 and for an electrical constant in Chapter 23. To make some sense of this confusing state of affairs, we use a subscript B for Boltzmann's constant to help us recognize it. In this book, you will see Boltzmann's constant as k_B , but you may see Boltzmann's constant in other resources as simply k .

◀ Boltzmann's constant

Example 19.4 Heating a Spray Can

A spray can containing a propellant gas at twice atmospheric pressure (202 kPa) and having a volume of 125.00 cm³ is at 22°C. It is then tossed into an open fire. (*Warning:* Do not do this experiment; it is very dangerous.) When the temperature of the gas in the can reaches 195°C, what is the pressure inside the can? Assume any change in the volume of the can is negligible.

SOLUTION

Conceptualize Intuitively, you should expect that the pressure of the gas in the container increases because of the increasing temperature.

Categorize We model the gas in the can as ideal and use the ideal gas law to calculate the new pressure.

Analyze Rearrange Equation 19.8:

$$(1) \quad \frac{PV}{T} = nR$$

No air escapes during the compression, so n , and therefore nR , remains constant. Hence, set the initial value of the left side of Equation (1) equal to the final value:

$$(2) \quad \frac{P_i V_i}{T_i} = \frac{P_f V_f}{T_f}$$

Because the initial and final volumes of the gas are assumed to be equal, cancel the volumes:

$$(3) \quad \frac{P_i}{T_i} = \frac{P_f}{T_f}$$

Solve for P_f :

$$P_f = \left(\frac{T_f}{T_i}\right)P_i = \left(\frac{468 \text{ K}}{295 \text{ K}}\right)(202 \text{ kPa}) = 320 \text{ kPa}$$

Finalize The higher the temperature, the higher the pressure exerted by the trapped gas as expected. If the pressure increases sufficiently, the can may explode. Because of this possibility, you should never dispose of spray cans in a fire.

WHAT IF? Suppose we include a volume change due to thermal expansion of the steel can as the temperature increases. Does that alter our answer for the final pressure significantly?

Answer Because the thermal expansion coefficient of steel is very small, we do not expect much of an effect on our final answer.

Find the change in the volume of the can using Equation 19.6 and the value for α for steel from Table 19.1:

$$\begin{aligned} \Delta V &= \beta V_i \Delta T = 3\alpha V_i \Delta T \\ &= 3[11 \times 10^{-6} (\text{°C})^{-1}](125.00 \text{ cm}^3)(173 \text{°C}) = 0.71 \text{ cm}^3 \end{aligned}$$

Start from Equation (2) again and find an equation for the final pressure:

$$P_f = \left(\frac{T_f}{T_i}\right)\left(\frac{V_i}{V_f}\right)P_i$$

This result differs from Equation (3) only in the factor V_i/V_f . Evaluate this factor:

$$\frac{V_i}{V_f} = \frac{125.00 \text{ cm}^3}{(125.00 \text{ cm}^3 + 0.71 \text{ cm}^3)} = 0.994 = 99.4\%$$

Therefore, the final pressure will differ by only 0.6% from the value calculated without considering the thermal expansion of the can. Taking 99.4% of the previous final pressure, the final pressure including thermal expansion is 318 kPa.

Summary

Definitions

Two objects are in **thermal equilibrium** with each other if they do not exchange energy when in thermal contact.

Temperature is the property that determines whether an object is in thermal equilibrium with other objects. Two objects in thermal equilibrium with each other are at the same temperature. The SI unit of absolute temperature is the **kelvin**, which is defined to be $1/273.16$ of the difference between absolute zero and the temperature of the triple point of water.

Concepts and Principles

The **zeroth law of thermodynamics** states that if objects A and B are separately in thermal equilibrium with a third object C, then objects A and B are in thermal equilibrium with each other.

When the temperature of an object is changed by an amount ΔT , its length changes by an amount ΔL that is proportional to ΔT and to its initial length L_i :

$$\Delta L = \alpha L_i \Delta T \quad (19.4)$$

where the constant α is the **average coefficient of linear expansion**. The **average coefficient of volume expansion** β for a solid is approximately equal to 3α .

An **ideal gas** is one for which PV/nT is constant. An ideal gas is described by the **equation of state**,

$$PV = nRT \quad (19.8)$$

where n equals the number of moles of the gas, P is its pressure, V is its volume, R is the universal gas constant ($8.314 \text{ J/mol} \cdot \text{K}$), and T is the absolute temperature of the gas. A real gas behaves approximately as an ideal gas if it has a low density.

Objective Questions

1. denotes answer available in *Student Solutions Manual/Study Guide*

- Markings to indicate length are placed on a steel tape in a room that is at a temperature of 22°C . Measurements are then made with the same tape on a day when the temperature is 27°C . Assume the objects you are measuring have a smaller coefficient of linear expansion than steel. Are the measurements (a) too long, (b) too short, or (c) accurate?
- When a certain gas under a pressure of $5.00 \times 10^6 \text{ Pa}$ at 25.0°C is allowed to expand to 3.00 times its original volume, its final pressure is $1.07 \times 10^6 \text{ Pa}$. What is its final temperature? (a) 450 K (b) 233 K (c) 212 K (d) 191 K (e) 115 K
- If the volume of an ideal gas is doubled while its temperature is quadrupled, does the pressure (a) remain the same, (b) decrease by a factor of 2, (c) decrease by a factor of 4, (d) increase by a factor of 2, or (e) increase by a factor of 4
- The pendulum of a certain pendulum clock is made of brass. When the temperature increases, what happens to the period of the clock? (a) It increases. (b) It decreases. (c) It remains the same.
- A temperature of 162°F is equivalent to what temperature in kelvins? (a) 373 K (b) 288 K (c) 345 K (d) 201 K (e) 308 K
- A cylinder with a piston holds 0.50 m^3 of oxygen at an absolute pressure of 4.0 atm. The piston is pulled outward, increasing the volume of the gas until the pressure drops to 1.0 atm. If the temperature stays constant, what new volume does the gas occupy? (a) 1.0 m^3 (b) 1.5 m^3 (c) 2.0 m^3 (d) 0.12 m^3 (e) 2.5 m^3
- What would happen if the glass of a thermometer expanded more on warming than did the liquid in the tube? (a) The thermometer would break. (b) It could be used only for temperatures below room temperature. (c) You would have to hold it with the bulb on top. (d) The scale on the thermometer is reversed so that higher temperature values would be found closer to the bulb. (e) The numbers would not be evenly spaced.
- A cylinder with a piston contains a sample of a thin gas. The kind of gas and the sample size can be changed. The cylinder can be placed in different constant-temperature baths, and the piston can be held in different positions. Rank the following cases according to the pressure of the gas from the highest to the lowest, displaying any cases of equality. (a) A 0.002-mol sample of oxygen is held at 300 K in a 100-cm^3 container. (b) A 0.002-mol sample of oxygen is held at 600 K in a 200-cm^3 container. (c) A 0.002-mol sample of oxygen is held at 600 K in a 300-cm^3 container. (d) A 0.004-mol sample of helium is held at 300 K in a 200-cm^3 container. (e) A 0.004-mol sample of helium is held at 250 K in a 200-cm^3 container.
- Two cylinders A and B at the same temperature contain the same quantity of the same kind of gas. Cylinder A has three times the volume of cylinder B. What can you conclude about the pressures the gases exert? (a) We can conclude nothing about the pressures.

- (b) The pressure in A is three times the pressure in B. (c) The pressures must be equal. (d) The pressure in A must be one-third the pressure in B.
- 10.** A rubber balloon is filled with 1 L of air at 1 atm and 300 K and is then put into a cryogenic refrigerator at 100 K. The rubber remains flexible as it cools. (i) What happens to the volume of the balloon? (a) It decreases to $\frac{1}{3}$ L. (b) It decreases to $1/\sqrt{3}$ L. (c) It is constant. (d) It increases to $\sqrt{3}$ L. (e) It increases to 3 L. (ii) What happens to the pressure of the air in the balloon? (a) It decreases to $\frac{1}{3}$ atm. (b) It decreases to $1/\sqrt{3}$ atm. (c) It is constant. (d) It increases to $\sqrt{3}$ atm. (e) It increases to 3 atm.
- 11.** The average coefficient of linear expansion of copper is $17 \times 10^{-6} (\text{°C})^{-1}$. The Statue of Liberty is 93 m tall on a summer morning when the temperature is 25°C. Assume the copper plates covering the statue are mounted edge to edge without expansion joints and do not buckle or bind on the framework supporting them as the day grows hot. What is the order of magnitude of the statue's increase in height? (a) 0.1 mm (b) 1 mm (c) 1 cm (d) 10 cm (e) 1 m
- 12.** Suppose you empty a tray of ice cubes into a bowl partly full of water and cover the bowl. After one-half hour, the contents of the bowl come to thermal equilibrium, with more liquid water and less ice than you started with. Which of the following is true? (a) The temperature of the liquid water is higher than the temperature of the remaining ice. (b) The temperature of the liquid water is the same as that of the ice. (c) The temperature of the liquid water is less than that of the ice. (d) The comparative temperatures of the liquid water and ice depend on the amounts present.
- 13.** A hole is drilled in a metal plate. When the metal is raised to a higher temperature, what happens to the diameter of the hole? (a) It decreases. (b) It increases. (c) It remains the same. (d) The answer depends on the initial temperature of the metal. (e) None of those answers is correct.
- 14.** On a very cold day in upstate New York, the temperature is -25°C , which is equivalent to what Fahrenheit temperature? (a) -46°F (b) -77°F (c) 18°F (d) -25°F (e) -13°F

Conceptual Questions

1. denotes answer available in *Student Solutions Manual/Study Guide*

- 1.** Common thermometers are made of a mercury column in a glass tube. Based on the operation of these thermometers, which has the larger coefficient of linear expansion, glass or mercury? (Don't answer the question by looking in a table.)
- 2.** A piece of copper is dropped into a beaker of water. (a) If the water's temperature rises, what happens to the temperature of the copper? (b) Under what conditions are the water and copper in thermal equilibrium?
- 3.** (a) What does the ideal gas law predict about the volume of a sample of gas at absolute zero? (b) Why is this prediction incorrect?
- 4.** Some picnickers stop at a convenience store to buy some food, including bags of potato chips. They then drive up into the mountains to their picnic site. When they unload the food, they notice that the bags of chips are puffed up like balloons. Why did that happen?
- 5.** In describing his upcoming trip to the Moon, and as portrayed in the movie *Apollo 13* (Universal, 1995), astronaut Jim Lovell said, "I'll be walking in a place where there's a 400-degree difference between sunlight and shadow." Suppose an astronaut standing on the Moon holds a thermometer in his gloved hand. (a) Is the thermometer reading the temperature of the vacuum at the Moon's surface? (b) Does it read any temperature? If so, what object or substance has that temperature?
- 6.** Metal lids on glass jars can often be loosened by running hot water over them. Why does that work?
- 7.** An automobile radiator is filled to the brim with water when the engine is cool. (a) What happens to the water when the engine is running and the water has been raised to a high temperature? (b) What do modern automobiles have in their cooling systems to prevent the loss of coolants?
- 8.** When the metal ring and metal sphere in Figure CQ19.8 are both at room temperature, the sphere can barely be passed through the ring. (a) After the sphere is warmed in a flame, it cannot be passed through the ring. Explain. (b) **What If?** What if the ring is warmed and the sphere is left at room temperature? Does the sphere pass through the ring?




Figure CQ19.8

- 9.** Is it possible for two objects to be in thermal equilibrium if they are not in contact with each other? Explain.
- 10.** Use a periodic table of the elements (see Appendix C) to determine the number of grams in one mole of (a) hydrogen, which has diatomic molecules; (b) helium; and (c) carbon monoxide.

Problems

WebAssign The problems found in this chapter may be assigned online in Enhanced WebAssign

1. straightforward; 2. intermediate; 3. challenging

1. full solution available in the *Student Solutions Manual/Study Guide*

AMT Analysis Model tutorial available in Enhanced WebAssign

GP Guided Problem

M Master It tutorial available in Enhanced WebAssign

W Watch It video solution available in Enhanced WebAssign

Section 19.2 Thermometers and the Celsius Temperature Scale

Section 19.3 The Constant-Volume Gas Thermometer and the Absolute Temperature Scale

- A nurse measures the temperature of a patient to be 41.5°C . (a) What is this temperature on the Fahrenheit scale? (b) Do you think the patient is seriously ill? Explain.
- The temperature difference between the inside and the outside of a home on a cold winter day is 57.0°F . Express this difference on (a) the Celsius scale and (b) the Kelvin scale.
- Convert the following temperatures to their values on the Fahrenheit and Kelvin scales: (a) the sublimation point of dry ice, -78.5°C ; (b) human body temperature, 37.0°C .
- The boiling point of liquid hydrogen is 20.3 K at atmospheric pressure. What is this temperature on (a) the Celsius scale and (b) the Fahrenheit scale?
- Liquid nitrogen has a boiling point of -195.81°C at atmospheric pressure. Express this temperature (a) in degrees Fahrenheit and (b) in kelvins.
- Death Valley holds the record for the highest recorded temperature in the United States. On July 10, 1913, at a place called Furnace Creek Ranch, the temperature rose to 134°F . The lowest U.S. temperature ever recorded occurred at Prospect Creek Camp in Alaska on January 23, 1971, when the temperature plummeted to -79.8°F . (a) Convert these temperatures to the Celsius scale. (b) Convert the Celsius temperatures to Kelvin.
- In a student experiment, a constant-volume gas thermometer is calibrated in dry ice (-78.5°C) and in boiling ethyl alcohol (78.0°C). The separate pressures are 0.900 atm and 1.635 atm . (a) What value of absolute zero in degrees Celsius does the calibration yield? What pressures would be found at (b) the freezing and (c) the boiling points of water? *Hint:* Use the linear relationship $P = A + BT$, where A and B are constants.

Section 19.4 Thermal Expansion of Solids and Liquids

Note: Table 19.1 is available for use in solving problems in this section.

- The concrete sections of a certain superhighway are designed to have a length of 25.0 m . The sections are poured and cured at 10.0°C . What minimum spacing

should the engineer leave between the sections to eliminate buckling if the concrete is to reach a temperature of 50.0°C ?

- The active element of a certain laser is made of a glass rod 30.0 cm long and 1.50 cm in diameter. Assume the average coefficient of linear expansion of the glass is equal to $9.00 \times 10^{-6} (\text{C}^{\circ})^{-1}$. If the temperature of the rod increases by 65.0°C , what is the increase in (a) its length, (b) its diameter, and (c) its volume?

- Review.** Inside the wall of a house, an L-shaped section of hot-water pipe consists of three parts: a straight, horizontal piece $h = 28.0\text{ cm}$ long; an elbow; and a straight, vertical piece $\ell = 134\text{ cm}$ long (Fig. P19.10). A stud and a second-story floorboard hold the ends of this section of copper pipe stationary. Find the magnitude and direction of the displacement of the pipe elbow when the water flow is turned on, raising the temperature of the pipe from 18.0°C to 46.5°C .

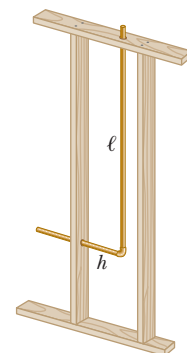


Figure P19.10

- A copper telephone wire has essentially no sag between poles 35.0 m apart on a winter day when the temperature is -20.0°C . How much longer is the wire on a summer day when the temperature is 35.0°C ?
- A pair of eyeglass frames is made of epoxy plastic. At room temperature (20.0°C), the frames have circular lens holes 2.20 cm in radius. To what temperature must the frames be heated if lenses 2.21 cm in radius are to be inserted in them? The average coefficient of linear expansion for epoxy is $1.30 \times 10^{-4} (\text{C}^{\circ})^{-1}$.
- The Trans-Alaska pipeline is $1\,300\text{ km}$ long, reaching from Prudhoe Bay to the port of Valdez. It experiences temperatures from -73°C to $+35^{\circ}\text{C}$. How much does the steel pipeline expand because of the difference in temperature? How can this expansion be compensated for?
- Each year thousands of children are badly burned by hot tap water. Figure P19.14 (page 584) shows a cross-sectional view of an antiscalding faucet attachment designed to prevent such accidents. Within the device, a spring made of material with a high coefficient of thermal expansion controls a movable plunger. When the

water temperature rises above a preset safe value, the expansion of the spring causes the plunger to shut off the water flow. Assuming that the initial length L of the unstressed spring is 2.40 cm and its coefficient of linear expansion is $22.0 \times 10^{-6} (\text{°C})^{-1}$, determine the increase in length of the spring when the water temperature rises by 30.0°C . (You will find the increase in length to be small. Therefore, to provide a greater variation in valve opening for the temperature change anticipated, actual devices have a more complicated mechanical design.)

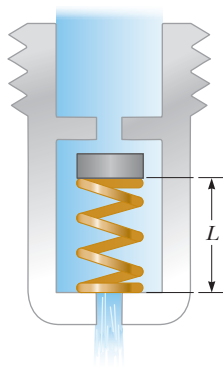


Figure P19.14

15. A square hole 8.00 cm along each side is cut in a sheet of copper. (a) Calculate the change in the area of this hole resulting when the temperature of the sheet is increased by 50.0 K. (b) Does this change represent an increase or a decrease in the area enclosed by the hole?
16. The average coefficient of volume expansion for carbon tetrachloride is $5.81 \times 10^{-4} (\text{°C})^{-1}$. If a 50.0-gal steel container is filled completely with carbon tetrachloride when the temperature is 10.0°C , how much will spill over when the temperature rises to 30.0°C ?
17. At 20.0°C , an aluminum ring has an inner diameter of 5.000 0 cm and a brass rod has a diameter of 5.050 0 cm. (a) If only the ring is warmed, what temperature must it reach so that it will just slip over the rod? (b) **What If?** If both the ring and the rod are warmed together, what temperature must they both reach so that the ring barely slips over the rod? (c) Would this latter process work? Explain. *Hint:* Consult Table 20.2 in the next chapter.
18. **Why is the following situation impossible?** A thin brass ring has an inner diameter 10.00 cm at 20.0°C . A solid aluminum cylinder has diameter 10.02 cm at 20.0°C . Assume the average coefficients of linear expansion of the two metals are constant. Both metals are cooled together to a temperature at which the ring can be slipped over the end of the cylinder.
19. A volumetric flask made of Pyrex is calibrated at 20.0°C . It is filled to the 100-mL mark with 35.0°C acetone. After the flask is filled, the acetone cools and the flask warms so that the combination of acetone and flask reaches a uniform temperature of 32.0°C . The combination is then cooled back to 20.0°C . (a) What is the volume of the acetone when it cools to 20.0°C ? (b) At the temperature of 32.0°C , does the level of acetone lie above or below the 100-mL mark on the flask? Explain.
20. **Review.** On a day that the temperature is 20.0°C , a concrete walk is poured in such a way that the ends of the walk are unable to move. Take Young's modulus for concrete to be $7.00 \times 10^9 \text{ N/m}^2$ and the compressive strength to be $2.00 \times 10^9 \text{ N/m}^2$. (a) What is the stress in the cement on a hot day of 50.0°C ? (b) Does the concrete fracture?
21. A hollow aluminum cylinder 20.0 cm deep has an internal capacity of 2.000 L at 20.0°C . It is completely filled with turpentine at 20.0°C . The turpentine and the aluminum cylinder are then slowly warmed together to 80.0°C . (a) How much turpentine overflows? (b) What is the volume of turpentine remaining in the cylinder at 80.0°C ? (c) If the combination with this amount of turpentine is then cooled back to 20.0°C , how far below the cylinder's rim does the turpentine's surface recede?
22. **Review.** The Golden Gate Bridge in San Francisco has a main span of length 1.28 km, one of the longest in the world. Imagine that a steel wire with this length and a cross-sectional area of $4.00 \times 10^{-6} \text{ m}^2$ is laid in a straight line on the bridge deck with its ends attached to the towers of the bridge. On a summer day the temperature of the wire is 35.0°C . (a) When winter arrives, the towers stay the same distance apart and the bridge deck keeps the same shape as its expansion joints open. When the temperature drops to -10.0°C , what is the tension in the wire? Take Young's modulus for steel to be $20.0 \times 10^{10} \text{ N/m}^2$. (b) Permanent deformation occurs if the stress in the steel exceeds its elastic limit of $3.00 \times 10^8 \text{ N/m}^2$. At what temperature would the wire reach its elastic limit? (c) **What If?** Explain how your answers to parts (a) and (b) would change if the Golden Gate Bridge were twice as long.
23. A sample of lead has a mass of 20.0 kg and a density of $11.3 \times 10^3 \text{ kg/m}^3$ at 0°C . (a) What is the density of lead at 90.0°C ? (b) What is the mass of the sample of lead at 90.0°C ?
24. A sample of a solid substance has a mass m and a density ρ_0 at a temperature T_0 . (a) Find the density of the substance if its temperature is increased by an amount ΔT in terms of the coefficient of volume expansion β . (b) What is the mass of the sample if the temperature is raised by an amount ΔT ?
25. **M** An underground gasoline tank can hold 1.00×10^3 gallons of gasoline at 52.0°F . Suppose the tank is being filled on a day when the outdoor temperature (and the temperature of the gasoline in a tanker truck) is 95.0°F . When the underground tank registers that it is full, how many gallons have been transferred from the truck, according to a non-temperature-compensated gauge on the truck? Assume the temperature of the gasoline quickly cools from 95.0°F to 52.0°F upon entering the tank.

Section 19.5 Macroscopic Description of an Ideal Gas

26. A rigid tank contains 1.50 moles of an ideal gas. Determine the number of moles of gas that must be withdrawn from the tank to lower the pressure of the gas from 25.0 atm to 5.00 atm. Assume the volume of the tank and the temperature of the gas remain constant during this operation.
27. Gas is confined in a tank at a pressure of 11.0 atm and a temperature of 25.0°C . If two-thirds of the gas

is withdrawn and the temperature is raised to 75.0°C , what is the pressure of the gas remaining in the tank?

28. Your father and your younger brother are confronted with the same puzzle. Your father's garden sprayer and your brother's water cannon both have tanks with a capacity of 5.00 L (Fig. P19.28). Your father puts a negligible amount of concentrated fertilizer into his tank. They both pour in 4.00 L of water and seal up their tanks, so the tanks also contain air at atmospheric pressure. Next, each uses a hand-operated pump to inject more air until the absolute pressure in the tank reaches 2.40 atm. Now each uses his device to spray out water—not air—until the stream becomes feeble, which it does when the pressure in the tank reaches 1.20 atm. To accomplish spraying out all the water, each finds he must pump up the tank three times. Here is the puzzle: most of the water sprays out after the second pumping. The first and the third pumping-up processes seem just as difficult as the second but result in a much smaller amount of water coming out. Account for this phenomenon.

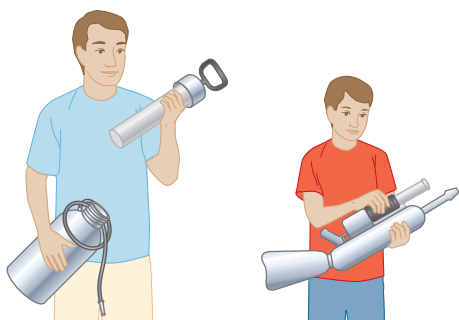


Figure P19.28

29. Gas is contained in an 8.00-L vessel at a temperature of 20.0°C and a pressure of 9.00 atm. (a) Determine the number of moles of gas in the vessel. (b) How many molecules are in the vessel?
30. A container in the shape of a cube 10.0 cm on each edge contains air (with equivalent molar mass 28.9 g/mol) at atmospheric pressure and temperature 300 K. Find (a) the mass of the gas, (b) the gravitational force exerted on it, and (c) the force it exerts on each face of the cube. (d) Why does such a small sample exert such a great force?
31. An auditorium has dimensions 10.0 m \times 20.0 m \times 30.0 m. How many molecules of air fill the auditorium at 20.0°C and a pressure of 101 kPa (1.00 atm)?
32. The pressure gauge on a tank registers the gauge pressure, which is the difference between the interior pressure and exterior pressure. When the tank is full of oxygen (O_2), it contains 12.0 kg of the gas at a gauge pressure of 40.0 atm. Determine the mass of oxygen that has been withdrawn from the tank when the pressure reading is 25.0 atm. Assume the temperature of the tank remains constant.
33. (a) Find the number of moles in one cubic meter of an ideal gas at 20.0°C and atmospheric pressure. (b) For air, Avogadro's number of molecules has mass 28.9 g. Calculate the mass of one cubic meter of air. (c) State how this result compares with the tabulated density of air at 20.0°C .
34. Use the definition of Avogadro's number to find the mass of a helium atom.
35. A popular brand of cola contains 6.50 g of carbon dioxide dissolved in 1.00 L of soft drink. If the evaporating carbon dioxide is trapped in a cylinder at 1.00 atm and 20.0°C , what volume does the gas occupy?
36. In state-of-the-art vacuum systems, pressures as low as 1.00×10^{-9} Pa are being attained. Calculate the number of molecules in a 1.00- m^3 vessel at this pressure and a temperature of 27.0°C .
37. An automobile tire is inflated with air originally at 10.0°C and normal atmospheric pressure. During the process, the air is compressed to 28.0% of its original volume and the temperature is increased to 40.0°C . (a) What is the tire pressure? (b) After the car is driven at high speed, the tire's air temperature rises to 85.0°C and the tire's interior volume increases by 2.00%. What is the new tire pressure (absolute)?
38. **Review.** To measure how far below the ocean surface a bird dives to catch a fish, a scientist uses a method originated by Lord Kelvin. He dusts the interiors of plastic tubes with powdered sugar and then seals one end of each tube. He captures the bird at nighttime in its nest and attaches a tube to its back. He then catches the same bird the next night and removes the tube. In one trial, using a tube 6.50 cm long, water washes away the sugar over a distance of 2.70 cm from the open end of the tube. Find the greatest depth to which the bird dived, assuming the air in the tube stayed at constant temperature.
39. **Review.** The mass of a hot-air balloon and its cargo (not including the air inside) is 200 kg. The air outside is at 10.0°C and 101 kPa. The volume of the balloon is 400 m^3 . To what temperature must the air in the balloon be warmed before the balloon will lift off? (Air density at 10.0°C is 1.244 kg/m^3 .)
40. A room of volume V contains air having equivalent molar mass M (in g/mol). If the temperature of the room is raised from T_1 to T_2 , what mass of air will leave the room? Assume that the air pressure in the room is maintained at P_0 .
41. **Review.** At 25.0 m below the surface of the sea, where the temperature is 5.00°C , a diver exhales an air bubble having a volume of 1.00 cm^3 . If the surface temperature of the sea is 20.0°C , what is the volume of the bubble just before it breaks the surface?
42. Estimate the mass of the air in your bedroom. State the quantities you take as data and the value you measure or estimate for each.
43. A cook puts 9.00 g of water in a 2.00-L pressure cooker that is then warmed to 500°C . What is the pressure inside the container?
44. The pressure gauge on a cylinder of gas registers the gauge pressure, which is the difference between the

interior pressure and the exterior pressure P_0 . Let's call the gauge pressure P_g . When the cylinder is full, the mass of the gas in it is m_i at a gauge pressure of P_{gi} . Assuming the temperature of the cylinder remains constant, show that the mass of the gas *remaining* in the cylinder when the pressure reading is P_{gf} is given by

$$m_f = m_i \left(\frac{P_{gf} + P_0}{P_{gi} + P_0} \right)$$

Additional Problems

45. Long-term space missions require reclamation of the oxygen in the carbon dioxide exhaled by the crew. In one method of reclamation, 1.00 mol of carbon dioxide produces 1.00 mol of oxygen and 1.00 mol of methane as a byproduct. The methane is stored in a tank under pressure and is available to control the attitude of the spacecraft by controlled venting. A single astronaut exhales 1.09 kg of carbon dioxide each day. If the methane generated in the respiration recycling of three astronauts during one week of flight is stored in an originally empty 150-L tank at -45.0°C , what is the final pressure in the tank?
46. A steel beam being used in the construction of a skyscraper has a length of 35.000 m when delivered on a cold day at a temperature of 15.000°F . What is the length of the beam when it is being installed later on a warm day when the temperature is 90.000°F ?
47. A spherical steel ball bearing has a diameter of 2.540 cm at 25.00°C . (a) What is its diameter when its temperature is raised to 100.0°C ? (b) What temperature change is required to increase its volume by 1.000%?
48. A bicycle tire is inflated to a gauge pressure of 2.50 atm when the temperature is 15.0°C . While a man rides the bicycle, the temperature of the tire rises to 45.0°C . Assuming the volume of the tire does not change, find the gauge pressure in the tire at the higher temperature.
49. In a chemical processing plant, a reaction chamber of fixed volume V_0 is connected to a reservoir chamber of fixed volume $4V_0$ by a passage containing a thermally insulating porous plug. The plug permits the chambers to be at different temperatures. The plug allows gas to pass from either chamber to the other, ensuring that the pressure is the same in both. At one point in the processing, both chambers contain gas at a pressure of 1.00 atm and a temperature of 27.0°C . Intake and exhaust valves to the pair of chambers are closed. The reservoir is maintained at 27.0°C while the reaction chamber is heated to 400°C . What is the pressure in both chambers after that is done?
50. *Why is the following situation impossible?* An apparatus is designed so that steam initially at $T = 150^\circ\text{C}$, $P = 1.00$ atm, and $V = 0.500$ m³ in a piston-cylinder apparatus undergoes a process in which (1) the volume remains constant and the pressure drops to 0.870 atm, followed by (2) an expansion in which the pressure remains constant and the volume increases to 1.00 m³, followed by (3) a return to the initial conditions. It is

important that the pressure of the gas never fall below 0.850 atm so that the piston will support a delicate and very expensive part of the apparatus. Without such support, the delicate apparatus can be severely damaged and rendered useless. When the design is turned into a working prototype, it operates perfectly.

51. **M** A mercury thermometer is constructed as shown in Figure P19.51. The Pyrex glass capillary tube has a diameter of 0.004 00 cm, and the bulb has a diameter of 0.250 cm. Find the change in height of the mercury column that occurs with a temperature change of 30.0°C .

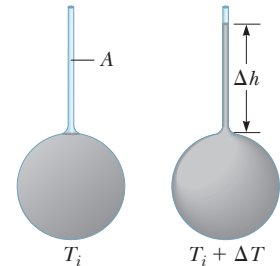


Figure P19.51
Problems 51 and 52.

52. A liquid with a coefficient of volume expansion β just fills a spherical shell of volume V (Fig. P19.51). The shell and the open capillary of area A projecting from the top of the sphere are made of a material with an average coefficient of linear expansion α . The liquid is free to expand into the capillary. Assuming the temperature increases by ΔT , find the distance Δh the liquid rises in the capillary.
53. **AMT** **Review.** An aluminum pipe is open at both ends and used as a flute. The pipe is cooled to 5.00°C , at which its length is 0.655 m. As soon as you start to play it, the pipe fills with air at 20.0°C . After that, by how much does its fundamental frequency change as the metal rises in temperature to 20.0°C ?

54. Two metal bars are made of invar and a third bar is made of aluminum. At 0°C , each of the three bars is drilled with two holes 40.0 cm apart. Pins are put through the holes to assemble the bars into an equilateral triangle as in Figure P19.54. (a) First ignore the expansion of the invar. Find

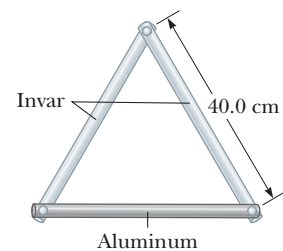


Figure P19.54

- the angle between the invar bars as a function of Celsius temperature. (b) Is your answer accurate for negative as well as positive temperatures? (c) Is it accurate for 0°C ? (d) Solve the problem again, including the expansion of the invar. Aluminum melts at 660°C and invar at $1\,427^\circ\text{C}$. Assume the tabulated expansion coefficients are constant. What are (e) the greatest and (f) the smallest attainable angles between the invar bars?
55. A student measures the length of a brass rod with a steel tape at 20.0°C . The reading is 95.00 cm. What will the tape indicate for the length of the rod when the rod and the tape are at (a) -15.0°C and (b) 55.0°C ?
56. The density of gasoline is 730 kg/m³ at 0°C . Its average coefficient of volume expansion is 9.60×10^{-4} ($^\circ\text{C}$)⁻¹. Assume 1.00 gal of gasoline occupies $0.003\,80$ m³.

How many extra kilograms of gasoline would you receive if you bought 10.0 gal of gasoline at 0°C rather than at 20.0°C from a pump that is not temperature compensated?

57. A liquid has a density ρ . (a) Show that the fractional change in density for a change in temperature ΔT is $\Delta\rho/\rho = -\beta \Delta T$. (b) What does the negative sign signify? (c) Fresh water has a maximum density of 1.000 0 g/cm³ at 4.0°C. At 10.0°C, its density is 0.999 7 g/cm³. What is β for water over this temperature interval? (d) At 0°C, the density of water is 0.999 9 g/cm³. What is the value for β over the temperature range 0°C to 4.00°C?
58. (a) Take the definition of the coefficient of volume expansion to be

$$\beta = \frac{1}{V} \left. \frac{dV}{dT} \right|_{P=\text{constant}} = \frac{1}{V} \frac{\partial V}{\partial T}$$

Use the equation of state for an ideal gas to show that the coefficient of volume expansion for an ideal gas at constant pressure is given by $\beta = 1/T$, where T is the absolute temperature. (b) What value does this expression predict for β at 0°C? State how this result compares with the experimental values for (c) helium and (d) air in Table 19.1. *Note:* These values are much larger than the coefficients of volume expansion for most liquids and solids.

59. **Review.** A clock with a brass pendulum has a period of 1.000 s at 20.0°C. If the temperature increases to 30.0°C, (a) by how much does the period change and (b) how much time does the clock gain or lose in one week?
60. A bimetallic strip of length L is made of two ribbons of different metals bonded together. (a) First assume the strip is originally straight. As the strip is warmed, the metal with the greater average coefficient of expansion expands more than the other, forcing the strip into an arc with the outer radius having a greater circumference (Fig. P19.60). Derive an expression for the angle of bending θ as a function of the initial length of the strips, their average coefficients of linear expansion, the change in temperature, and the separation of the centers of the strips ($\Delta r = r_2 - r_1$). (b) Show that the angle of bending decreases to zero when ΔT decreases to zero and also when the two average coefficients of expansion become equal. (c) **What If?** What happens if the strip is cooled?

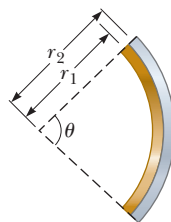


Figure P19.60

61. The rectangular plate shown in Figure P19.61 has an area A_i equal to ℓw . If the temperature increases by ΔT ,

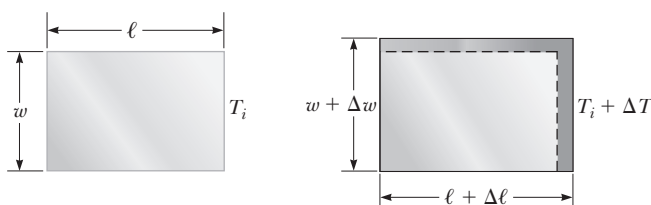


Figure P19.61

each dimension increases according to Equation 19.4, where α is the average coefficient of linear expansion. (a) Show that the increase in area is $\Delta A = 2\alpha A_i \Delta T$. (b) What approximation does this expression assume?

62. The measurement of the average coefficient of volume expansion β for a liquid is complicated because the container also changes size with temperature. Figure P19.62 shows a simple means for measuring β despite the expansion of the container. With this apparatus, one arm of a U-tube is maintained at 0°C in a water–ice bath, and the other arm is maintained at a different temperature T_C in a constant-temperature bath. The connecting tube is horizontal. A difference in the length or diameter of the tube between the two arms of the U-tube has no effect on the pressure balance at the bottom of the tube because the pressure depends only on the depth of the liquid. Derive an expression for β for the liquid in terms of h_0 , h_t , and T_C .

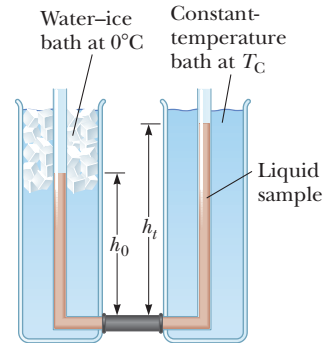


Figure P19.62

63. A copper rod and a steel rod are different in length by 5.00 cm at 0°C. The rods are warmed and cooled together. (a) Is it possible that the length difference remains constant at all temperatures? Explain. (b) If so, describe the lengths at 0°C as precisely as you can. Can you tell which rod is longer? Can you tell the lengths of the rods?

64. **AMT** **GP** A vertical cylinder of cross-sectional area A is fitted with a tight-fitting, frictionless piston of mass m (Fig. P19.64). The piston is not restricted in its motion in any way and is supported by the gas at pressure P below it. Atmospheric pressure is P_0 . We wish to find the height h in Figure P19.64. (a) What analysis model is appropriate to describe the piston? (b) Write an appropriate force equation for the piston from this analysis model in terms of P , P_0 , m , A , and g . (c) Suppose n moles of an ideal gas are in the cylinder at a temperature of T . Substitute for P in your answer to part (b) to find the height h of the piston above the bottom of the cylinder.

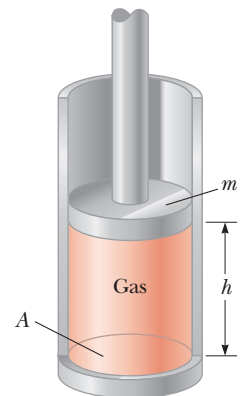


Figure P19.64

65. **Review.** Consider an object with any one of the shapes displayed in Table 10.2. What is the percentage increase in the moment of inertia of the object when it is warmed from 0°C to 100°C if it is composed of (a) copper or (b) aluminum? Assume the average linear expansion coefficients shown in Table 19.1 do not vary between 0°C and 100°C. (c) Why are the answers for parts (a) and (b) the same for all the shapes?

66. (a) Show that the density of an ideal gas occupying a volume V is given by $\rho = PM/RT$, where M is the molar mass. (b) Determine the density of oxygen gas at atmospheric pressure and 20.0°C .

67. Two concrete spans of a 250-m-long bridge are placed end to end so that no room is allowed for expansion (Fig. P19.67a). If a temperature increase of 20.0°C occurs, what is the height y to which the spans rise when they buckle (Fig. P19.67b)?

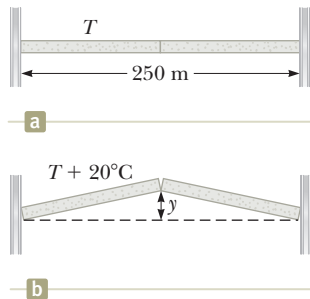


Figure P19.67

Problems 67 and 68.

68. Two concrete spans that form a bridge of length L are placed end to end so that no room is allowed for expansion (Fig. P19.67a). If a temperature increase of ΔT occurs, what is the height y to which the spans rise when they buckle (Fig. P19.67b)?

69. **Review.** (a) Derive an expression for the buoyant force on a spherical balloon, submerged in water, as a function of the depth h below the surface, the volume V_i of the balloon at the surface, the pressure P_0 at the surface, and the density ρ_w of the water. Assume the water temperature does not change with depth. (b) Does the buoyant force increase or decrease as the balloon is submerged? (c) At what depth is the buoyant force one-half the surface value?

70. **Review.** Following a collision in outer space, a copper disk at 850°C is rotating about its axis with an angular speed of 25.0 rad/s . As the disk radiates infrared light, its temperature falls to 20.0°C . No external torque acts on the disk. (a) Does the angular speed change as the disk cools? Explain how it changes or why it does not. (b) What is its angular speed at the lower temperature?

71. Starting with Equation 19.10, show that the total pressure P in a container filled with a mixture of several ideal gases is $P = P_1 + P_2 + P_3 + \dots$, where P_1, P_2, \dots are the pressures that each gas would exert if it alone filled the container. (These individual pressures are called the *partial pressures* of the respective gases.) This result is known as *Dalton's law of partial pressures*.

Challenge Problems

72. **Review.** A steel wire and a copper wire, each of diameter 2.000 mm, are joined end to end. At 40.0°C , each has an unstretched length of 2.000 m. The wires are connected between two fixed supports 4.000 m apart on a tabletop. The steel wire extends from $x = -2.000\text{ m}$ to $x = 0$, the copper wire extends from $x = 0$ to $x = 2.000\text{ m}$, and the tension is negligible. The temperature is then lowered to 20.0°C . Assume the average coefficient of linear expansion of steel is $11.0 \times 10^{-6} (\text{C}^\circ)^{-1}$ and that of copper is $17.0 \times 10^{-6} (\text{C}^\circ)^{-1}$. Take Young's modulus for steel to be $20.0 \times 10^{10}\text{ N/m}^2$ and that for

copper to be $11.0 \times 10^{10}\text{ N/m}^2$. At this lower temperature, find (a) the tension in the wire and (b) the x coordinate of the junction between the wires.

73. **Review.** A steel guitar string with a diameter of 1.00 mm is stretched between supports 80.0 cm apart. The temperature is 0.0°C . (a) Find the mass per unit length of this string. (Use the value $7.86 \times 10^3\text{ kg/m}^3$ for the density.) (b) The fundamental frequency of transverse oscillations of the string is 200 Hz. What is the tension in the string? Next, the temperature is raised to 30.0°C . Find the resulting values of (c) the tension and (d) the fundamental frequency. Assume both the Young's modulus of $20.0 \times 10^{10}\text{ N/m}^2$ and the average coefficient of expansion $\alpha = 11.0 \times 10^{-6} (\text{C}^\circ)^{-1}$ have constant values between 0.0°C and 30.0°C .

74. A cylinder is closed by a piston connected to a spring of constant $2.00 \times 10^3\text{ N/m}$ (see Fig. P19.74).

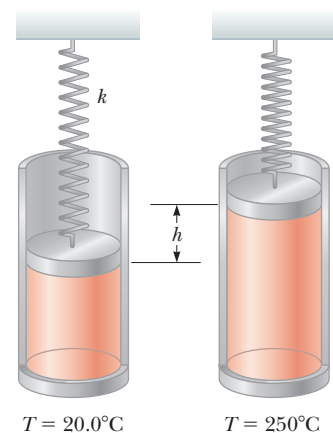


Figure P19.74

- With the spring relaxed, the cylinder is filled with 5.00 L of gas at a pressure of 1.00 atm and a temperature of 20.0°C . (a) If the piston has a cross-sectional area of 0.0100 m^2 and negligible mass, how high will it rise when the temperature is raised to 250°C ? (b) What is the pressure of the gas at 250°C ?

75. Helium gas is sold in steel tanks that will rupture if subjected to tensile stress greater than its yield strength of $5 \times 10^8\text{ N/m}^2$. If the helium is used to inflate a balloon, could the balloon lift the spherical tank the helium came in? Justify your answer. *Suggestion:* You may consider a spherical steel shell of radius r and thickness t having the density of iron and on the verge of breaking apart into two hemispheres because it contains helium at high pressure.

76. A cylinder that has a 40.0-cm radius and is 50.0 cm deep is filled with air at 20.0°C and 1.00 atm (Fig. P19.76a). A 20.0-kg piston is now lowered into the cylinder, compressing the air trapped inside as it takes equilibrium height h_i (Fig. P19.76b). Finally, a 25.0-kg dog stands on the piston, further compressing the air, which remains at 20°C (Fig. P19.76c). (a) How far down

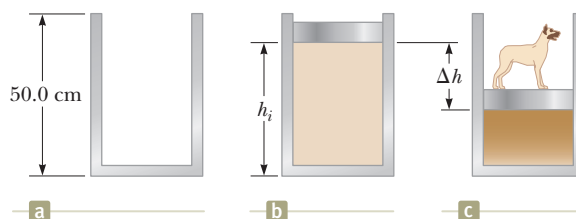


Figure P19.76

(Δh) does the piston move when the dog steps onto it?
 (b) To what temperature should the gas be warmed to raise the piston and dog back to h_i ?

77. The relationship $L = L_i + \alpha L_i \Delta T$ is a valid approximation when $\alpha \Delta T$ is small. If $\alpha \Delta T$ is large, one must integrate the relationship $dL = \alpha L dT$ to determine the final length. (a) Assuming the coefficient of linear expansion of a material is constant as L varies, determine a general expression for the final length of a rod made of the material. Given a rod of length 1.00 m and a temperature change of 100.0°C , determine the error caused by the approximation when (b) $\alpha = 2.00 \times 10^{-5} (\text{C}^\circ)^{-1}$ (a typical value for a metal) and (c) when $\alpha = 0.0200 (\text{C}^\circ)^{-1}$ (an unrealistically large value for comparison). (d) Using the equation from part (a), solve Problem 21 again to find more accurate results.

78. **Review.** A house roof is a perfectly flat plane that makes an angle θ with the horizontal. When its temperature changes, between T_c before dawn each day and T_h in the middle of each afternoon, the roof expands and contracts uniformly with a coefficient of thermal expansion α_1 . Resting on the roof is a flat, rectangular metal plate with expansion coefficient α_2 , greater than α_1 . The length of the plate is L , measured along the slope of the roof. The component of the plate's weight perpendicular to the roof is supported by a normal force uniformly distributed over the area of the plate. The coefficient of kinetic friction between the plate and the roof is μ_k . The plate is always at the same temperature as the roof, so we assume its temperature is continuously changing. Because of the difference in expansion coefficients, each bit of the plate is moving relative to the roof below it, except for points along a certain horizontal line running across the plate called the stationary line. If the temperature is rising, parts

of the plate below the stationary line are moving down relative to the roof and feel a force of kinetic friction acting up the roof. Elements of area above the stationary line are sliding up the roof, and on them kinetic friction acts downward parallel to the roof. The stationary line occupies no area, so we assume no force of static friction acts on the plate while the temperature is changing. The plate as a whole is very nearly in equilibrium, so the net friction force on it must be equal to the component of its weight acting down the incline. (a) Prove that the stationary line is at a distance of

$$\frac{L}{2} \left(1 - \frac{\tan \theta}{\mu_k} \right)$$

below the top edge of the plate. (b) Analyze the forces that act on the plate when the temperature is falling and prove that the stationary line is at that same distance above the bottom edge of the plate. (c) Show that the plate steps down the roof like an inchworm, moving each day by the distance

$$\frac{L}{\mu_k} (\alpha_2 - \alpha_1) (T_h - T_c) \tan \theta$$

- (d) Evaluate the distance an aluminum plate moves each day if its length is 1.20 m, the temperature cycles between 4.00°C and 36.0°C , and if the roof has slope 18.5° , coefficient of linear expansion $1.50 \times 10^{-5} (\text{C}^\circ)^{-1}$, and coefficient of friction 0.420 with the plate. (e) **What If?** What if the expansion coefficient of the plate is less than that of the roof? Will the plate creep up the roof?
79. A 1.00-km steel railroad rail is fastened securely at both ends when the temperature is 20.0°C . As the temperature increases, the rail buckles, taking the shape of an arc of a vertical circle. Find the height h of the center of the rail when the temperature is 25.0°C . (You will need to solve a transcendental equation.)

The First Law of Thermodynamics

- 20.1 Heat and Internal Energy
- 20.2 Specific Heat and Calorimetry
- 20.3 Latent Heat
- 20.4 Work and Heat in Thermodynamic Processes
- 20.5 The First Law of Thermodynamics
- 20.6 Some Applications of the First Law of Thermodynamics
- 20.7 Energy Transfer Mechanisms in Thermal Processes



In this photograph of the Mt. Baker area near Bellingham, Washington, we see evidence of water in all three phases. In the lake is liquid water, and solid water in the form of snow appears on the ground. The clouds in the sky consist of liquid water droplets that have condensed from the gaseous water vapor in the air. Changes of a substance from one phase to another are a result of energy transfer. (©iStockphoto.com/KingWu)

Until about 1850, the fields of thermodynamics and mechanics were considered to be two distinct branches of science. The principle of conservation of energy seemed to describe only certain kinds of mechanical systems. Mid-19th-century experiments performed by Englishman James Joule and others, however, showed a strong connection between the transfer of energy by heat in thermal processes and the transfer of energy by work in mechanical processes. Today we know that mechanical energy can be transformed to internal energy, which is formally defined in this chapter. Once the concept of energy was generalized from mechanics to include internal energy, the principle of conservation of energy as discussed in Chapter 8 emerged as a universal law of nature.

This chapter focuses on the concept of internal energy, the first law of thermodynamics, and some important applications of the first law. The first law of thermodynamics describes systems in which the only energy change is that of internal energy and the transfers of energy are by heat and work. A major difference in our discussion of work in this chapter from that in most of the chapters on mechanics is that we will consider work done on *deformable* systems.

20.1 Heat and Internal Energy

At the outset, it is important to make a major distinction between internal energy and heat, terms that are often incorrectly used interchangeably in popular language.

Internal energy is all the energy of a system that is associated with its microscopic components—atoms and molecules—when viewed from a reference frame at rest with respect to the center of mass of the system.

The last part of this sentence ensures that any bulk kinetic energy of the system due to its motion through space is not included in internal energy. Internal energy includes kinetic energy of random translational, rotational, and vibrational motion of molecules; vibrational potential energy associated with forces between atoms in molecules; and electric potential energy associated with forces between molecules. It is useful to relate internal energy to the temperature of an object, but this relationship is limited. We show in Section 20.3 that internal energy changes can also occur in the absence of temperature changes. In that discussion, we will investigate the internal energy of the system when there is a *physical change*, most often related to a phase change, such as melting or boiling. We assign energy associated with *chemical changes*, related to chemical reactions, to the potential energy term in Equation 8.2, not to internal energy. Therefore, we discuss the *chemical potential energy* in, for example, a human body (due to previous meals), the gas tank of a car (due to an earlier transfer of fuel), and a battery of an electric circuit (placed in the battery during its construction in the manufacturing process).

Heat is defined as a process of transferring energy across the boundary of a system because of a temperature difference between the system and its surroundings. It is also the amount of energy Q transferred by this process.

When you *heat* a substance, you are transferring energy into it by placing it in contact with surroundings that have a higher temperature. Such is the case, for example, when you place a pan of cold water on a stove burner. The burner is at a higher temperature than the water, and so the water gains energy by heat.

Read this definition of heat (Q in Eq. 8.2) very carefully. In particular, notice what heat is *not* in the following common quotes. (1) Heat is *not* energy in a hot substance. For example, “The boiling water has a lot of heat” is incorrect; the boiling water has *internal energy* E_{int} . (2) Heat is *not* radiation. For example, “It was so hot because the sidewalk was radiating heat” is incorrect; energy is leaving the sidewalk by *electromagnetic radiation*, T_{ER} in Equation 8.2. (3) Heat is *not* warmth of an environment. For example, “The heat in the air was so oppressive” is incorrect; on a hot day, the air has a high *temperature* T .

As an analogy to the distinction between heat and internal energy, consider the distinction between work and mechanical energy discussed in Chapter 7. The work done on a system is a measure of the amount of energy transferred to the system from its surroundings, whereas the mechanical energy (kinetic energy plus potential energy) of a system is a consequence of the motion and configuration of the system. Therefore, when a person does work on a system, energy is transferred from the person to the system. It makes no sense to talk about the work *of* a system; one can refer only to the work done *on* or *by* a system when some process has occurred in which energy has been transferred to or from the system. Likewise, it makes no sense to talk about the heat *of* a system; one can refer to heat only when energy has been transferred as a result of a temperature difference. Both heat and work are ways of transferring energy between a system and its surroundings.

Units of Heat

Early studies of heat focused on the resultant increase in temperature of a substance, which was often water. Initial notions of heat were based on a fluid called *caloric* that flowed from one substance to another and caused changes in temperature. From the name of this mythical fluid came an energy unit related to thermal processes, the **calorie (cal)**, which is defined as the amount of energy transfer

Pitfall Prevention 20.1

Internal Energy, Thermal Energy, and Bond Energy When reading other physics books, you may see terms such as *thermal energy* and *bond energy*. Thermal energy can be interpreted as that part of the internal energy associated with random motion of molecules and therefore related to temperature. Bond energy is the intermolecular potential energy. Therefore,

$$\text{Internal energy} = \text{thermal energy} + \text{bond energy}$$

Although this breakdown is presented here for clarification with regard to other books, we will not use these terms because there is no need for them.

Pitfall Prevention 20.2

Heat, Temperature, and Internal Energy Are Different As you read the newspaper or explore the Internet, be alert for incorrectly used phrases including the word *heat* and think about the proper word to be used in place of *heat*. Incorrect examples include “As the truck braked to a stop, a large amount of heat was generated by friction” and “The heat of a hot summer day”



© The Art Gallery Collection/Alamy

James Prescott Joule

British physicist (1818–1889)

Joule received some formal education in mathematics, philosophy, and chemistry from John Dalton but was in large part self-educated. Joule's research led to the establishment of the principle of conservation of energy. His study of the quantitative relationship among electrical, mechanical, and chemical effects of heat culminated in his announcement in 1843 of the amount of work required to produce a unit of energy, called the mechanical equivalent of heat.

necessary to raise the temperature of 1 g of water from 14.5°C to 15.5°C.¹ (The “Calorie,” written with a capital “C” and used in describing the energy content of foods, is actually a kilocalorie.) The unit of energy in the U.S. customary system is the **British thermal unit (Btu)**, which is defined as the amount of energy transfer required to raise the temperature of 1 lb of water from 63°F to 64°F.

Once the relationship between energy in thermal and mechanical processes became clear, there was no need for a separate unit related to thermal processes. The *joule* has already been defined as an energy unit based on mechanical processes. Scientists are increasingly turning away from the calorie and the Btu and are using the joule when describing thermal processes. In this textbook, heat, work, and internal energy are usually measured in joules.

The Mechanical Equivalent of Heat

In Chapters 7 and 8, we found that whenever friction is present in a mechanical system, the mechanical energy in the system decreases; in other words, mechanical energy is not conserved in the presence of nonconservative forces. Various experiments show that this mechanical energy does not simply disappear but is transformed into internal energy. You can perform such an experiment at home by hammering a nail into a scrap piece of wood. What happens to all the kinetic energy of the hammer once you have finished? Some of it is now in the nail as internal energy, as demonstrated by the nail being measurably warmer. Notice that there is *no* transfer of energy by heat in this process. For the nail and board as a nonisolated system, Equation 8.2 becomes $\Delta E_{\text{int}} = W + T_{\text{MW}}$, where W is the work done by the hammer on the nail and T_{MW} is the energy leaving the system by sound waves when the nail is struck. Although this connection between mechanical and internal energy was first suggested by Benjamin Thompson, it was James Prescott Joule who established the equivalence of the decrease in mechanical energy and the increase in internal energy.

A schematic diagram of Joule's most famous experiment is shown in Figure 20.1. The system of interest is the Earth, the two blocks, and the water in a thermally insulated container. Work is done within the system on the water by a rotating paddle wheel, which is driven by heavy blocks falling at a constant speed. If the energy transformed in the bearings and the energy passing through the walls by heat are neglected, the decrease in potential energy of the system as the blocks fall equals the work done by the paddle wheel on the water and, in turn, the increase in internal energy of the water. If the two blocks fall through a distance h , the decrease in potential energy of the system is $2mgh$, where m is the mass of one block; this energy causes the temperature of the water to increase. By varying the conditions of the experiment, Joule found that the decrease in mechanical energy is proportional to the product of the mass of the water and the increase in water temperature. The proportionality constant was found to be approximately $4.18 \text{ J/g} \cdot ^\circ\text{C}$. Hence, 4.18 J of mechanical energy raises the temperature of 1 g of water by 1°C. More precise measurements taken later demonstrated the proportionality to be $4.186 \text{ J/g} \cdot ^\circ\text{C}$ when the temperature of the water was raised from 14.5°C to 15.5°C. We adopt this “15-degree calorie” value:

$$1 \text{ cal} = 4.186 \text{ J} \quad (20.1)$$

This equality is known, for purely historical reasons, as the **mechanical equivalent of heat**. A more proper name would be *equivalence between mechanical energy and internal energy*, but the historical name is well entrenched in our language, despite the incorrect use of the word *heat*.

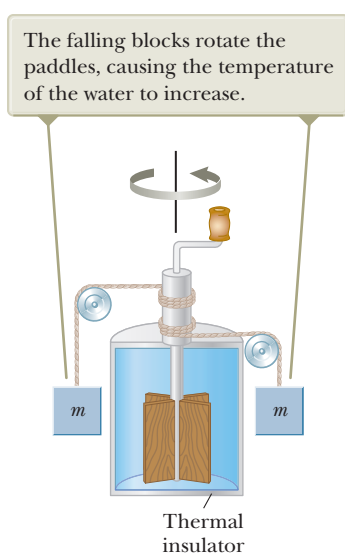


Figure 20.1 Joule's experiment for determining the mechanical equivalent of heat.

¹Originally, the calorie was defined as the energy transfer necessary to raise the temperature of 1 g of water by 1°C. Careful measurements, however, showed that the amount of energy required to produce a 1°C change depends somewhat on the initial temperature; hence, a more precise definition evolved.

Example 20.1 Losing Weight the Hard Way AM

A student eats a dinner rated at 2 000 Calories. He wishes to do an equivalent amount of work in the gymnasium by lifting a 50.0-kg barbell. How many times must he raise the barbell to expend this much energy? Assume he raises the barbell 2.00 m each time he lifts it and he regains no energy when he lowers the barbell.

SOLUTION

Conceptualize Imagine the student raising the barbell. He is doing work on the system of the barbell and the Earth, so energy is leaving his body. The total amount of work that the student must do is 2 000 Calories.

Categorize We model the system of the barbell and the Earth as a *nonisolated system for energy*.

Analyze Reduce the conservation of energy equation, Equation 8.2, to the appropriate expression for the system of the barbell and the Earth:

$$(1) \quad \Delta U_{\text{total}} = W_{\text{total}}$$

Express the change in gravitational potential energy of the system after the barbell is raised once:

$$\Delta U = mgh$$

Express the total amount of energy that must be transferred into the system by work for lifting the barbell n times, assuming energy is not regained when the barbell is lowered:

$$(2) \quad \Delta U_{\text{total}} = nmgh$$

Substitute Equation (2) into Equation (1):

$$nmgh = W_{\text{total}}$$

Solve for n :

$$n = \frac{W_{\text{total}}}{mgh}$$

Substitute numerical values:

$$\begin{aligned} n &= \frac{(2\,000 \text{ Cal})}{(50.0 \text{ kg})(9.80 \text{ m/s}^2)(2.00 \text{ m})} \left(\frac{1.00 \times 10^3 \text{ cal}}{\text{Calorie}} \right) \left(\frac{4.186 \text{ J}}{1 \text{ cal}} \right) \\ &= 8.54 \times 10^3 \text{ times} \end{aligned}$$

Finalize If the student is in good shape and lifts the barbell once every 5 s, it will take him about 12 h to perform this feat. Clearly, it is much easier for this student to lose weight by dieting.

In reality, the human body is not 100% efficient. Therefore, not all the energy transformed within the body from the dinner transfers out of the body by work done on the barbell. Some of this energy is used to pump blood and perform other functions within the body. Therefore, the 2 000 Calories can be worked off in less time than 12 h when these other energy processes are included.

20.2 Specific Heat and Calorimetry

When energy is added to a system and there is no change in the kinetic or potential energy of the system, the temperature of the system usually rises. (An exception to this statement is the case in which a system undergoes a change of state—also called a *phase transition*—as discussed in the next section.) If the system consists of a sample of a substance, we find that the quantity of energy required to raise the temperature of a given mass of the substance by some amount varies from one substance to another. For example, the quantity of energy required to raise the temperature of 1 kg of water by 1°C is 4 186 J, but the quantity of energy required to raise the temperature of 1 kg of copper by 1°C is only 387 J. In the discussion that follows, we shall use heat as our example of energy transfer, but keep in mind that the temperature of the system could be changed by means of any method of energy transfer.

The **heat capacity** C of a particular sample is defined as the amount of energy needed to raise the temperature of that sample by 1°C. From this definition, we see that if energy Q produces a change ΔT in the temperature of a sample, then

$$Q = C\Delta T \quad (20.2)$$

Table 20.1 Specific Heats of Some Substances at 25°C and Atmospheric Pressure

Substance	Specific Heat (J/kg · °C)	Substance	Specific Heat (J/kg · °C)
<i>Elemental solids</i>		<i>Other solids</i>	
Aluminum	900	Brass	380
Beryllium	1 830	Glass	837
Cadmium	230	Ice (−5°C)	2 090
Copper	387	Marble	860
Germanium	322	Wood	1 700
Gold	129	<i>Liquids</i>	
Iron	448	Alcohol (ethyl)	2 400
Lead	128	Mercury	140
Silicon	703	Water (15°C)	4 186
Silver	234	<i>Gas</i>	
		Steam (100°C)	2 010

Note: To convert values to units of cal/g · °C, divide by 4 186.

The **specific heat** c of a substance is the heat capacity per unit mass. Therefore, if energy Q transfers to a sample of a substance with mass m and the temperature of the sample changes by ΔT , the specific heat of the substance is

$$c \equiv \frac{Q}{m \Delta T} \quad (20.3)$$

Specific heat ►

Pitfall Prevention 20.3

An Unfortunate Choice of Terminology The name *specific heat* is an unfortunate holdover from the days when thermodynamics and mechanics developed separately. A better name would be *specific energy transfer*, but the existing term is too entrenched to be replaced.

Pitfall Prevention 20.4

Energy Can Be Transferred by Any Method The symbol Q represents the amount of energy transferred, but keep in mind that the energy transfer in Equation 20.4 could be by *any* of the methods introduced in Chapter 8; it does not have to be heat. For example, repeatedly bending a wire coat hanger raises the temperature at the bending point by *work*.

Specific heat is essentially a measure of how thermally insensitive a substance is to the addition of energy. The greater a material's specific heat, the more energy must be added to a given mass of the material to cause a particular temperature change. Table 20.1 lists representative specific heats.

From this definition, we can relate the energy Q transferred between a sample of mass m of a material and its surroundings to a temperature change ΔT as

$$Q = mc \Delta T \quad (20.4)$$

For example, the energy required to raise the temperature of 0.500 kg of water by 3.00°C is $Q = (0.500 \text{ kg})(4 186 \text{ J/kg} \cdot \text{°C})(3.00\text{°C}) = 6.28 \times 10^3 \text{ J}$. Notice that when the temperature increases, Q and ΔT are taken to be positive and energy transfers into the system. When the temperature decreases, Q and ΔT are negative and energy transfers out of the system.

We can identify $mc \Delta T$ as the change in internal energy of the system if we ignore any thermal expansion or contraction of the system. (Thermal expansion or contraction would result in a very small amount of work being done on the system by the surrounding air.) Then, Equation 20.4 is a reduced form of Equation 8.2: $\Delta E_{\text{int}} = Q$. The internal energy of the system can be changed by transferring energy into the system by any mechanism. For example, if the system is a baked potato in a microwave oven, Equation 8.2 reduces to the following analog to Equation 20.4: $\Delta E_{\text{int}} = T_{\text{ER}} = mc \Delta T$, where T_{ER} is the energy transferred to the potato from the microwave oven by electromagnetic radiation. If the system is the air in a bicycle pump, which becomes hot when the pump is operated, Equation 8.2 reduces to the following analog to Equation 20.4: $\Delta E_{\text{int}} = W = mc \Delta T$, where W is the work done on the pump by the operator. By identifying $mc \Delta T$ as ΔE_{int} , we have taken a step toward a better understanding of temperature: temperature is related to the energy of the molecules of a system. We will learn more details of this relationship in Chapter 21.

Specific heat varies with temperature. If, however, temperature intervals are not too great, the temperature variation can be ignored and c can be treated as a constant.²

²The definition given by Equation 20.4 assumes the specific heat does not vary with temperature over the interval $\Delta T = T_f - T_i$. In general, if c varies with temperature over the interval, the correct expression for Q is $Q = m \int_{T_i}^{T_f} c \, dT$.

For example, the specific heat of water varies by only about 1% from 0°C to 100°C at atmospheric pressure. Unless stated otherwise, we shall neglect such variations.

- Quick Quiz 20.1** Imagine you have 1 kg each of iron, glass, and water, and all three samples are at 10°C. (a) Rank the samples from highest to lowest temperature after 100 J of energy is added to each sample. (b) Rank the samples from greatest to least amount of energy transferred by heat if each sample increases in temperature by 20°C.

Notice from Table 20.1 that water has the highest specific heat of common materials. This high specific heat is in part responsible for the moderate climates found near large bodies of water. As the temperature of a body of water decreases during the winter, energy is transferred from the cooling water to the air by heat, increasing the internal energy of the air. Because of the high specific heat of water, a relatively large amount of energy is transferred to the air for even modest temperature changes of the water. The prevailing winds on the West Coast of the United States are toward the land (eastward). Hence, the energy liberated by the Pacific Ocean as it cools keeps coastal areas much warmer than they would otherwise be. As a result, West Coast states generally have more favorable winter weather than East Coast states, where the prevailing winds do not tend to carry the energy toward land.

Calorimetry

One technique for measuring specific heat involves heating a sample to some known temperature T_x , placing it in a vessel containing water of known mass and temperature $T_w < T_x$, and measuring the temperature of the water after equilibrium has been reached. This technique is called **calorimetry**, and devices in which this energy transfer occurs are called **calorimeters**. Figure 20.2 shows the hot sample in the cold water and the resulting energy transfer by heat from the high-temperature part of the system to the low-temperature part. If the system of the sample and the water is isolated, the principle of conservation of energy requires that the amount of energy Q_{hot} that leaves the sample (of unknown specific heat) equal the amount of energy Q_{cold} that enters the water.³ Conservation of energy allows us to write the mathematical representation of this energy statement as

$$Q_{\text{cold}} = -Q_{\text{hot}} \quad (20.5)$$

Suppose m_x is the mass of a sample of some substance whose specific heat we wish to determine. Let's call its specific heat c_x and its initial temperature T_x as shown in Figure 20.2. Likewise, let m_w , c_w , and T_w represent corresponding values for the water. If T_f is the final temperature after the system comes to equilibrium, Equation 20.4 shows that the energy transfer for the water is $m_w c_w (T_f - T_w)$, which is positive because $T_f > T_w$, and that the energy transfer for the sample of unknown specific heat is $m_x c_x (T_f - T_x)$, which is negative. Substituting these expressions into Equation 20.5 gives

$$m_w c_w (T_f - T_w) = -m_x c_x (T_f - T_x)$$

This equation can be solved for the unknown specific heat c_x .

Example 20.2 Cooling a Hot Ingot

A 0.0500-kg ingot of metal is heated to 200.0°C and then dropped into a calorimeter containing 0.400 kg of water initially at 20.0°C. The final equilibrium temperature of the mixed system is 22.4°C. Find the specific heat of the metal.

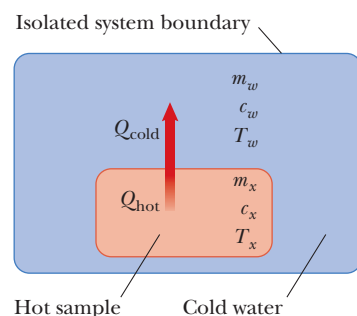


Figure 20.2 In a calorimetry experiment, a hot sample whose specific heat is unknown is placed in cold water in a container that isolates the system from the environment.

Pitfall Prevention 20.5

Remember the Negative Sign It is *critical* to include the negative sign in Equation 20.5. The negative sign in the equation is necessary for consistency with our sign convention for energy transfer. The energy transfer Q_{hot} has a negative value because energy is leaving the hot substance. The negative sign in the equation ensures that the right side is a positive number, consistent with the left side, which is positive because energy is entering the cold water.

³For precise measurements, the water container should be included in our calculations because it also exchanges energy with the sample. Doing so would require that we know the container's mass and composition, however. If the mass of the water is much greater than that of the container, we can neglect the effects of the container.

continued

▶ 20.2 continued

SOLUTION

Conceptualize Imagine the process occurring in the isolated system of Figure 20.2. Energy leaves the hot ingot and goes into the cold water, so the ingot cools off and the water warms up. Once both are at the same temperature, the energy transfer stops.

Categorize We use an equation developed in this section, so we categorize this example as a substitution problem.

Use Equation 20.4 to evaluate each side of Equation 20.5:

$$m_w c_w (T_f - T_w) = -m_x c_x (T_f - T_x)$$

Solve for c_x :

$$c_x = \frac{m_w c_w (T_f - T_w)}{m_x (T_x - T_f)}$$

Substitute numerical values:

$$\begin{aligned} c_x &= \frac{(0.400 \text{ kg})(4186 \text{ J/kg} \cdot ^\circ\text{C})(22.4^\circ\text{C} - 20.0^\circ\text{C})}{(0.0500 \text{ kg})(200.0^\circ\text{C} - 22.4^\circ\text{C})} \\ &= 453 \text{ J/kg} \cdot ^\circ\text{C} \end{aligned}$$

The ingot is most likely iron as you can see by comparing this result with the data given in Table 20.1. The temperature of the ingot is initially above the steam point. Therefore, some of the water may vaporize when the ingot is dropped into the water. We assume the system is sealed and this steam cannot escape. Because the final equilibrium temperature is lower than the steam point, any steam that does result recondenses back into water.

WHAT IF? Suppose you are performing an experiment in the laboratory that uses this technique to determine the specific heat of a sample and you wish to decrease the overall uncertainty in your final result for c_x . Of the data given in this example, changing which value would be most effective in decreasing the uncertainty?

Answer The largest experimental uncertainty is associated with the small difference in temperature of 2.4°C for the water. For example, using the rules for propagation of uncertainty in Appendix Section B.8, an uncertainty of 0.1°C in each of T_f and T_w leads to an 8% uncertainty in their difference. For this temperature difference to be larger experimentally, the most effective change is to *decrease the amount of water*.

Example 20.3 Fun Time for a Cowboy **AM**

A cowboy fires a silver bullet with a muzzle speed of 200 m/s into the pine wall of a saloon. Assume all the internal energy generated by the impact remains with the bullet. What is the temperature change of the bullet?

SOLUTION

Conceptualize Imagine similar experiences you may have had in which mechanical energy is transformed to internal energy when a moving object is stopped. For example, as mentioned in Section 20.1, a nail becomes warm after it is hit a few times with a hammer.

Categorize The bullet is modeled as an *isolated system*. No work is done on the system because the force from the wall moves through no displacement. This example is similar to the skateboarder pushing off a wall in Section 9.7. There, no work is done on the skateboarder by the wall, and potential energy stored in the body from previous meals is transformed to kinetic energy. Here, no work is done by the wall on the bullet, and kinetic energy is transformed to internal energy.

Analyze Reduce the conservation of energy equation, Equation 8.2, to the appropriate expression for the system of the bullet:

$$(1) \quad \Delta K + \Delta E_{\text{int}} = 0$$

The change in the bullet's internal energy is related to its change in temperature:

$$(2) \quad \Delta E_{\text{int}} = mc \Delta T$$

Substitute Equation (2) into Equation (1):

$$(0 - \frac{1}{2}mv^2) + mc \Delta T = 0$$

► 20.3 continued

Solve for ΔT , using $234 \text{ J/kg} \cdot ^\circ\text{C}$ as the specific heat of silver (see Table 20.1):

$$(3) \quad \Delta T = \frac{\frac{1}{2}mv^2}{mc} = \frac{v^2}{2c} = \frac{(200 \text{ m/s})^2}{2(234 \text{ J/kg} \cdot ^\circ\text{C})} = 85.5^\circ\text{C}$$

Finalize Notice that the result does not depend on the mass of the bullet.

WHAT IF? Suppose the cowboy runs out of silver bullets and fires a lead bullet at the same speed into the wall. Will the temperature change of the bullet be larger or smaller?

Answer Table 20.1 shows that the specific heat of lead is $128 \text{ J/kg} \cdot ^\circ\text{C}$, which is smaller than that for silver. Therefore, a given amount of energy input or transformation raises lead to a higher temperature than silver and the final temperature of the lead bullet will be larger. In Equation (3), let's substitute the new value for the specific heat:

$$\Delta T = \frac{v^2}{2c} = \frac{(200 \text{ m/s})^2}{2(128 \text{ J/kg} \cdot ^\circ\text{C})} = 156^\circ\text{C}$$

There is no requirement that the silver and lead bullets have the same mass to determine this change in temperature. The only requirement is that they have the same speed.

20.3 Latent Heat

As we have seen in the preceding section, a substance can undergo a change in temperature when energy is transferred between it and its surroundings. In some situations, however, the transfer of energy does not result in a change in temperature. That is the case whenever the physical characteristics of the substance change from one form to another; such a change is commonly referred to as a **phase change**. Two common phase changes are from solid to liquid (melting) and from liquid to gas (boiling); another is a change in the crystalline structure of a solid. All such phase changes involve a change in the system's internal energy but no change in its temperature. The increase in internal energy in boiling, for example, is represented by the breaking of bonds between molecules in the liquid state; this bond breaking allows the molecules to move farther apart in the gaseous state, with a corresponding increase in intermolecular potential energy.

As you might expect, different substances respond differently to the addition or removal of energy as they change phase because their internal molecular arrangements vary. Also, the amount of energy transferred during a phase change depends on the amount of substance involved. (It takes less energy to melt an ice cube than it does to thaw a frozen lake.) When discussing two phases of a material, we will use the term *higher-phase material* to mean the material existing at the higher temperature. So, for example, if we discuss water and ice, water is the higher-phase material, whereas steam is the higher-phase material in a discussion of steam and water. Consider a system containing a substance in two phases in equilibrium such as water and ice. The initial amount of the higher-phase material, water, in the system is m_i . Now imagine that energy Q enters the system. As a result, the final amount of water is m_f due to the melting of some of the ice. Therefore, the amount of ice that melted, equal to the amount of new water, is $\Delta m = m_f - m_i$. We define the **latent heat** for this phase change as

$$L \equiv \frac{Q}{\Delta m} \quad (20.6)$$

This parameter is called latent heat (literally, the “hidden” heat) because this added or removed energy does not result in a temperature change. The value of L for a substance depends on the nature of the phase change as well as on the properties of the substance. If the entire amount of the lower-phase material undergoes a phase change, the change in mass Δm of the higher-phase material is equal to the initial mass of the lower-phase material. For example, if an ice cube of mass m on a

Table 20.2 Latent Heats of Fusion and Vaporization

Substance	Melting Point (°C)	Latent Heat of Fusion (J/kg)	Boiling Point (°C)	Latent Heat of Vaporization (J/kg)
Helium ^a	-272.2	5.23×10^3	-268.93	2.09×10^4
Oxygen	-218.79	1.38×10^4	-182.97	2.13×10^5
Nitrogen	-209.97	2.55×10^4	-195.81	2.01×10^5
Ethyl alcohol	-114	1.04×10^5	78	8.54×10^5
Water	0.00	3.33×10^5	100.00	2.26×10^6
Sulfur	119	3.81×10^4	444.60	3.26×10^5
Lead	327.3	2.45×10^4	1 750	8.70×10^5
Aluminum	660	3.97×10^5	2 450	1.14×10^7
Silver	960.80	8.82×10^4	2 193	2.33×10^6
Gold	1 063.00	6.44×10^4	2 660	1.58×10^6
Copper	1 083	1.34×10^5	1 187	5.06×10^6

^aHelium does not solidify at atmospheric pressure. The melting point given here corresponds to a pressure of 2.5 MPa.

plate melts completely, the change in mass of the water is $m_f - 0 = m$, which is the mass of new water and is also equal to the initial mass of the ice cube.

From the definition of latent heat, and again choosing heat as our energy transfer mechanism, the energy required to change the phase of a pure substance is

Energy transferred to a substance during a phase change

$$Q = L \Delta m \quad (20.7)$$

where Δm is the change in mass of the higher-phase material.

Latent heat of fusion L_f is the term used when the phase change is from solid to liquid (*to fuse* means “to combine by melting”), and **latent heat of vaporization** L_v is the term used when the phase change is from liquid to gas (the liquid “vaporizes”).⁴ The latent heats of various substances vary considerably as data in Table 20.2 show. When energy enters a system, causing melting or vaporization, the amount of the higher-phase material increases, so Δm is positive and Q is positive, consistent with our sign convention. When energy is extracted from a system, causing freezing or condensation, the amount of the higher-phase material decreases, so Δm is negative and Q is negative, again consistent with our sign convention. Keep in mind that Δm in Equation 20.7 always refers to the higher-phase material.

To understand the role of latent heat in phase changes, consider the energy required to convert a system consisting of a 1.00-g cube of ice at -30.0°C to steam at 120.0°C . Figure 20.3 indicates the experimental results obtained when energy is gradually added to the ice. The results are presented as a graph of temperature of the system versus energy added to the system. Let’s examine each portion of the red-brown curve, which is divided into parts A through E.

Part A. On this portion of the curve, the temperature of the system changes from -30.0°C to 0.0°C . Equation 20.4 indicates that the temperature varies linearly with the energy added, so the experimental result is a straight line on the graph. Because the specific heat of ice is $2\,090\text{ J/kg} \cdot ^\circ\text{C}$, we can calculate the amount of energy added by using Equation 20.4:

$$Q = m_i c_i \Delta T = (1.00 \times 10^{-3}\text{ kg})(2\,090\text{ J/kg} \cdot ^\circ\text{C})(30.0^\circ\text{C}) = 62.7\text{ J}$$

Part B. When the temperature of the system reaches 0.0°C , the ice–water mixture remains at this temperature—even though energy is being added—until all the ice melts. The energy required to melt 1.00 g of ice at 0.0°C is, from Equation 20.7,

$$Q = L_f \Delta m_w = L_f m_i = (3.33 \times 10^5\text{ J/kg})(1.00 \times 10^{-3}\text{ kg}) = 333\text{ J}$$

Pitfall Prevention 20.6

Signs Are Critical Sign errors occur very often when students apply calorimetry equations. For phase changes, remember that Δm in Equation 20.7 is always the change in mass of the higher-phase material. In Equation 20.4, be sure your ΔT is *always* the final temperature minus the initial temperature. In addition, you must *always* include the negative sign on the right side of Equation 20.5.

⁴When a gas cools, it eventually *condenses*; that is, it returns to the liquid phase. The energy given up per unit mass is called the *latent heat of condensation* and is numerically equal to the latent heat of vaporization. Likewise, when a liquid cools, it eventually solidifies, and the *latent heat of solidification* is numerically equal to the latent heat of fusion.

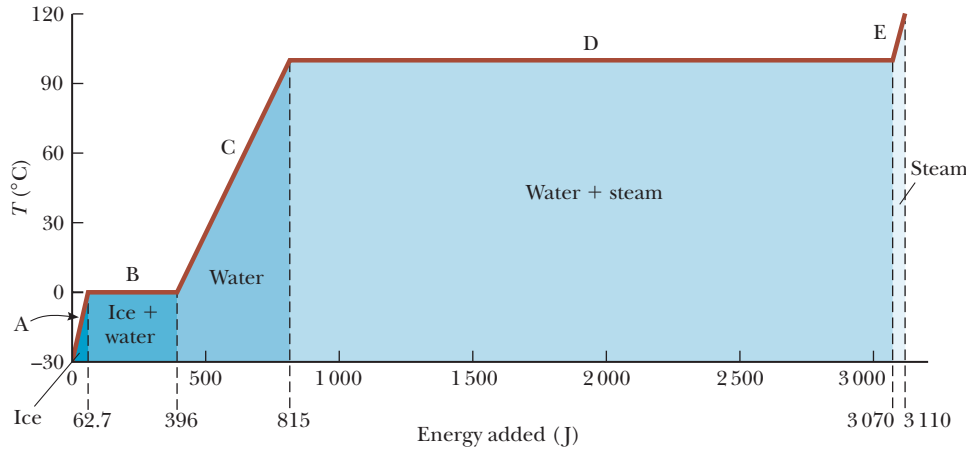


Figure 20.3 A plot of temperature versus energy added when a system initially consisting of 1.00 g of ice at -30.0°C is converted to steam at 120.0°C .

At this point, we have moved to the 396 J ($= 62.7\text{ J} + 333\text{ J}$) mark on the energy axis in Figure 20.3.

Part C. Between 0.0°C and 100.0°C , nothing surprising happens. No phase change occurs, and so all energy added to the system, which is now water, is used to increase its temperature. The amount of energy necessary to increase the temperature from 0.0°C to 100.0°C is

$$Q = m_w c_w \Delta T = (1.00 \times 10^{-3} \text{ kg})(4.19 \times 10^3 \text{ J/kg} \cdot ^{\circ}\text{C})(100.0^{\circ}\text{C}) = 419 \text{ J}$$

where m_w is the mass of the water in the system, which is the same as the mass m_i of the original ice.

Part D. At 100.0°C , another phase change occurs as the system changes from water at 100.0°C to steam at 100.0°C . Similar to the ice–water mixture in part B, the water–steam mixture remains at 100.0°C —even though energy is being added—until all the liquid has been converted to steam. The energy required to convert 1.00 g of water to steam at 100.0°C is

$$Q = L_v \Delta m_s = L_v m_w = (2.26 \times 10^6 \text{ J/kg})(1.00 \times 10^{-3} \text{ kg}) = 2.26 \times 10^3 \text{ J}$$

Part E. On this portion of the curve, as in parts A and C, no phase change occurs; therefore, all energy added is used to increase the temperature of the system, which is now steam. The energy that must be added to raise the temperature of the steam from 100.0°C to 120.0°C is

$$Q = m_s c_s \Delta T = (1.00 \times 10^{-3} \text{ kg})(2.01 \times 10^3 \text{ J/kg} \cdot ^{\circ}\text{C})(20.0^{\circ}\text{C}) = 40.2 \text{ J}$$

The total amount of energy that must be added to the system to change 1 g of ice at -30.0°C to steam at 120.0°C is the sum of the results from all five parts of the curve, which is $3.11 \times 10^3 \text{ J}$. Conversely, to cool 1 g of steam at 120.0°C to ice at -30.0°C , we must remove $3.11 \times 10^3 \text{ J}$ of energy.

Notice in Figure 20.3 the relatively large amount of energy that is transferred into the water to vaporize it to steam. Imagine reversing this process, with a large amount of energy transferred out of steam to condense it into water. That is why a burn to your skin from steam at 100°C is much more damaging than exposure of your skin to water at 100°C . A very large amount of energy enters your skin from the steam, and the steam remains at 100°C for a long time while it condenses. Conversely, when your skin makes contact with water at 100°C , the water immediately begins to drop in temperature as energy transfers from the water to your skin.

If liquid water is held perfectly still in a very clean container, it is possible for the water to drop below 0°C without freezing into ice. This phenomenon, called **supercooling**, arises because the water requires a disturbance of some sort for the molecules to move apart and start forming the large, open ice structure that makes the

density of ice lower than that of water as discussed in Section 19.4. If supercooled water is disturbed, it suddenly freezes. The system drops into the lower-energy configuration of bound molecules of the ice structure, and the energy released raises the temperature back to 0°C .

Commercial hand warmers consist of liquid sodium acetate in a sealed plastic pouch. The solution in the pouch is in a stable supercooled state. When a disk in the pouch is clicked by your fingers, the liquid solidifies and the temperature increases, just like the supercooled water just mentioned. In this case, however, the freezing point of the liquid is higher than body temperature, so the pouch feels warm to the touch. To reuse the hand warmer, the pouch must be boiled until the solid liquefies. Then, as it cools, it passes below its freezing point into the supercooled state.

It is also possible to create **superheating**. For example, clean water in a very clean cup placed in a microwave oven can sometimes rise in temperature beyond 100°C without boiling because the formation of a bubble of steam in the water requires scratches in the cup or some type of impurity in the water to serve as a nucleation site. When the cup is removed from the microwave oven, the superheated water can become explosive as bubbles form immediately and the hot water is forced upward out of the cup.

- Quick Quiz 20.2** Suppose the same process of adding energy to the ice cube is performed as discussed above, but instead we graph the internal energy of the system as a function of energy input. What would this graph look like?

Example 20.4

Cooling the Steam

AM

What mass of steam initially at 130°C is needed to warm 200 g of water in a 100-g glass container from 20.0°C to 50.0°C ?

SOLUTION

Conceptualize Imagine placing water and steam together in a closed insulated container. The system eventually reaches a uniform state of water with a final temperature of 50.0°C .

Categorize Based on our conceptualization of this situation, we categorize this example as one involving calorimetry in which a phase change occurs. The calorimeter is an *isolated system* for *energy*: energy transfers between the components of the system but does not cross the boundary between the system and the environment.

Analyze Write Equation 20.5 to describe the calorimetry process:

$$(1) \quad Q_{\text{cold}} = -Q_{\text{hot}}$$

The steam undergoes three processes: first a decrease in temperature to 100°C , then condensation into liquid water, and finally a decrease in temperature of the water to 50.0°C . Find the energy transfer in the first process using the unknown mass m_s of the steam:

$$Q_1 = m_s c_s \Delta T_s$$

Find the energy transfer in the second process:

$$Q_2 = L_v \Delta m_s = L_v(0 - m_s) = -m_s L_v$$

Find the energy transfer in the third process:

$$Q_3 = m_s c_w \Delta T_{\text{hot water}}$$

Add the energy transfers in these three stages:

$$(2) \quad Q_{\text{hot}} = Q_1 + Q_2 + Q_3 = m_s(c_s \Delta T_s - L_v + c_w \Delta T_{\text{hot water}})$$

The 20.0°C water and the glass undergo only one process, an increase in temperature to 50.0°C . Find the energy transfer in this process:

$$(3) \quad Q_{\text{cold}} = m_w c_w \Delta T_{\text{cold water}} + m_g c_g \Delta T_{\text{glass}}$$

Substitute Equations (2) and (3) into Equation (1):

$$m_w c_w \Delta T_{\text{cold water}} + m_g c_g \Delta T_{\text{glass}} = -m_s(c_s \Delta T_s - L_v + c_w \Delta T_{\text{hot water}})$$

Solve for m_s :

$$m_s = -\frac{m_w c_w \Delta T_{\text{cold water}} + m_g c_g \Delta T_{\text{glass}}}{c_s \Delta T_s - L_v + c_w \Delta T_{\text{hot water}}}$$

20.4 continued

Substitute numerical values:

$$m_s = - \frac{(0.200 \text{ kg})(4186 \text{ J/kg} \cdot ^\circ\text{C})(50.0^\circ\text{C} - 20.0^\circ\text{C}) + (0.100 \text{ kg})(837 \text{ J/kg} \cdot ^\circ\text{C})(50.0^\circ\text{C} - 20.0^\circ\text{C})}{(2010 \text{ J/kg} \cdot ^\circ\text{C})(100^\circ\text{C} - 130^\circ\text{C}) - (2.26 \times 10^6 \text{ J/kg}) + (4186 \text{ J/kg} \cdot ^\circ\text{C})(50.0^\circ\text{C} - 100^\circ\text{C})}$$

$$= 1.09 \times 10^{-2} \text{ kg} = \boxed{10.9 \text{ g}}$$

WHAT IF? What if the final state of the system is water at 100°C ? Would we need more steam or less steam? How would the analysis above change?

Answer More steam would be needed to raise the temperature of the water and glass to 100°C instead of 50.0°C . There would be two major changes in the analysis. First, we would not have a term Q_3 for the steam because the water that condenses from the steam does not cool below 100°C . Second, in Q_{cold} , the temperature change would be 80.0°C instead of 30.0°C . For practice, show that the result is a required mass of steam of 31.8 g.

20.4 Work and Heat in Thermodynamic Processes

In thermodynamics, we describe the *state* of a system using such variables as pressure, volume, temperature, and internal energy. As a result, these quantities belong to a category called **state variables**. For any given configuration of the system, we can identify values of the state variables. (For mechanical systems, the state variables include kinetic energy K and potential energy U .) A state of a system can be specified only if the system is in thermal equilibrium internally. In the case of a gas in a container, internal thermal equilibrium requires that every part of the gas be at the same pressure and temperature.

A second category of variables in situations involving energy is **transfer variables**. These variables are those that appear on the right side of the conservation of energy equation, Equation 8.2. Such a variable has a nonzero value if a process occurs in which energy is transferred across the system's boundary. The transfer variable is positive or negative, depending on whether energy is entering or leaving the system. Because a transfer of energy across the boundary represents a change in the system, transfer variables are not associated with a given state of the system, but rather with a *change* in the state of the system.

In the previous sections, we discussed heat as a transfer variable. In this section, we study another important transfer variable for thermodynamic systems, work. Work performed on particles was studied extensively in Chapter 7, and here we investigate the work done on a deformable system, a gas. Consider a gas contained in a cylinder fitted with a movable piston (Fig. 20.4). At equilibrium, the gas occupies a volume V and exerts a uniform pressure P on the cylinder's walls and on the piston. If the piston has a cross-sectional area A , the magnitude of the force exerted by the gas on the piston is $F = PA$. By Newton's third law, the magnitude of the force exerted by the piston on the gas is also PA . Now let's assume we push the piston inward and compress the gas **quasi-statically**, that is, slowly enough to allow the system to remain essentially in internal thermal equilibrium at all times. The point of application of the force on the gas is the bottom face of the piston. As the piston is pushed downward by an external force $\vec{F} = -F\hat{j}$ through a displacement of $d\vec{r} = dy\hat{j}$ (Fig. 20.4b), the work done on the gas is, according to our definition of work in Chapter 7,

$$dW = \vec{F} \cdot d\vec{r} = -F\hat{j} \cdot dy\hat{j} = -F dy = -PA dy$$

The mass of the piston is assumed to be negligible in this discussion. Because $A dy$ is the change in volume of the gas dV , we can express the work done on the gas as

$$dW = -P dV \quad (20.8)$$

If the gas is compressed, dV is negative and the work done on the gas is positive. If the gas expands, dV is positive and the work done on the gas is negative. If the

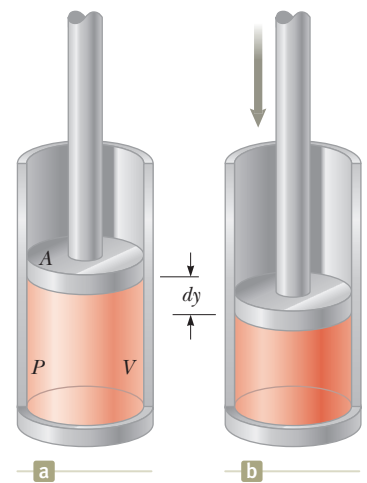


Figure 20.4 Work is done on a gas contained in a cylinder at a pressure P as the piston is pushed downward so that the gas is compressed.

volume remains constant, the work done on the gas is zero. The total work done on the gas as its volume changes from V_i to V_f is given by the integral of Equation 20.8:

$$W = - \int_{V_i}^{V_f} P dV \quad (20.9)$$

Work done on a gas ►

The work done on a gas equals the negative of the area under the PV curve. The area is negative here because the volume is decreasing, resulting in positive work.

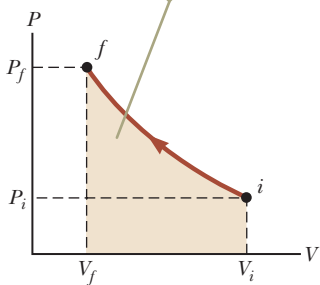


Figure 20.5 A gas is compressed quasi-statically (slowly) from state i to state f . An outside agent must do positive work on the gas to compress it.

To evaluate this integral, you must know how the pressure varies with volume during the process.

In general, the pressure is not constant during a process followed by a gas, but depends on the volume and temperature. If the pressure and volume are known at each step of the process, the state of the gas at each step can be plotted on an important graphical representation called a **PV diagram** as in Figure 20.5. This type of diagram allows us to visualize a process through which a gas is progressing. The curve on a PV diagram is called the *path* taken between the initial and final states.

Notice that the integral in Equation 20.9 is equal to the area under a curve on a PV diagram. Therefore, we can identify an important use for PV diagrams:

The work done on a gas in a quasi-static process that takes the gas from an initial state to a final state is the negative of the area under the curve on a PV diagram, evaluated between the initial and final states.

For the process of compressing a gas in a cylinder, the work done depends on the particular path taken between the initial and final states as Figure 20.5 suggests. To illustrate this important point, consider several different paths connecting i and f (Fig. 20.6). In the process depicted in Figure 20.6a, the volume of the gas is first reduced from V_i to V_f at constant pressure P_i and the pressure of the gas then increases from P_i to P_f by heating at constant volume V_f . The work done on the gas along this path is $-P_i(V_f - V_i)$. In Figure 20.6b, the pressure of the gas is increased from P_i to P_f at constant volume V_i and then the volume of the gas is reduced from V_i to V_f at constant pressure P_f . The work done on the gas is $-P_f(V_f - V_i)$. This value is greater than that for the process described in Figure 20.6a because the piston is moved through the same displacement by a larger force. Finally, for the process described in Figure 20.6c, where both P and V change continuously, the work done on the gas has some value between the values obtained in the first two processes. To evaluate the work in this case, the function $P(V)$ must be known so that we can evaluate the integral in Equation 20.9.

The energy transfer Q into or out of a system by heat also depends on the process. Consider the situations depicted in Figure 20.7. In each case, the gas has the same initial volume, temperature, and pressure, and is assumed to be ideal. In Figure 20.7a, the gas is thermally insulated from its surroundings except at the bottom of the gas-filled region, where it is in thermal contact with an energy reservoir. An *energy reservoir* is a source of energy that is considered to be so great that a finite transfer of energy to or from the reservoir does not change its temperature. The piston is held

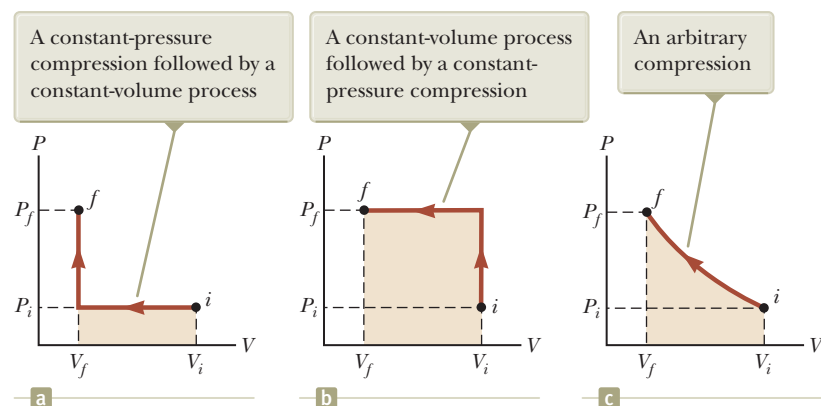


Figure 20.6 The work done on a gas as it is taken from an initial state to a final state depends on the path between these states.

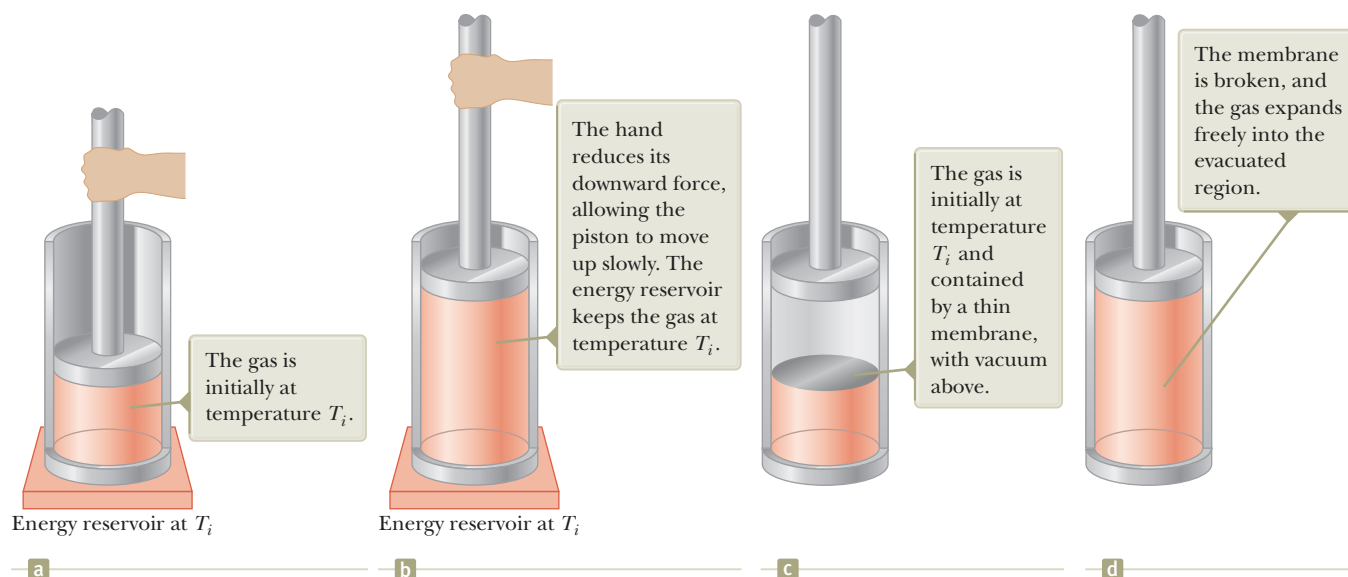


Figure 20.7 Gas in a cylinder. (a) The gas is in contact with an energy reservoir. The walls of the cylinder are perfectly insulating, but the base in contact with the reservoir is conducting. (b) The gas expands slowly to a larger volume. (c) The gas is contained by a membrane in half of a volume, with vacuum in the other half. The entire cylinder is perfectly insulating. (d) The gas expands freely into the larger volume.

at its initial position by an external agent such as a hand. When the force holding the piston is reduced slightly, the piston rises very slowly to its final position shown in Figure 20.7b. Because the piston is moving upward, the gas is doing work on the piston. During this expansion to the final volume V_f , just enough energy is transferred by heat from the reservoir to the gas to maintain a constant temperature T_i .

Now consider the completely thermally insulated system shown in Figure 20.7c. When the membrane is broken, the gas expands rapidly into the vacuum until it occupies a volume V_f and is at a pressure P_f . The final state of the gas is shown in Figure 20.7d. In this case, the gas does no work because it does not apply a force; no force is required to expand into a vacuum. Furthermore, no energy is transferred by heat through the insulating wall.

As we discuss in Section 20.5, experiments show that the temperature of the ideal gas does not change in the process indicated in Figures 20.7c and 20.7d. Therefore, the initial and final states of the ideal gas in Figures 20.7a and 20.7b are identical to the initial and final states in Figures 20.7c and 20.7d, but the paths are different. In the first case, the gas does work on the piston and energy is transferred slowly to the gas by heat. In the second case, no energy is transferred by heat and the value of the work done is zero. Therefore, energy transfer by heat, like work done, depends on the particular process occurring in the system. In other words, because heat and work both depend on the path followed on a PV diagram between the initial and final states, neither quantity is determined solely by the endpoints of a thermodynamic process.

20.5 The First Law of Thermodynamics

When we introduced the law of conservation of energy in Chapter 8, we stated that the change in the energy of a system is equal to the sum of all transfers of energy across the system's boundary (Eq. 8.2). The **first law of thermodynamics** is a special case of the law of conservation of energy that describes processes in which only the internal energy⁵ changes and the only energy transfers are by heat and work:

$$\Delta E_{\text{int}} = Q + W \quad (20.10)$$

◀ First law of thermodynamics

⁵It is an unfortunate accident of history that the traditional symbol for internal energy is U , which is also the traditional symbol for potential energy as introduced in Chapter 7. To avoid confusion between potential energy and internal energy, we use the symbol E_{int} for internal energy in this book. If you take an advanced course in thermodynamics, however, be prepared to see U used as the symbol for internal energy in the first law.

Pitfall Prevention 20.7

Dual Sign Conventions Some physics and engineering books present the first law as $\Delta E_{\text{int}} = Q - W$, with a minus sign between the heat and work. The reason is that work is defined in these treatments as the work done *by* the gas rather than *on* the gas, as in our treatment. The equivalent equation to Equation 20.9 in these treatments defines work as $W = \int_{V_i}^{V_f} P dV$. Therefore, if positive work is done by the gas, energy is leaving the system, leading to the negative sign in the first law.

In your studies in other chemistry or engineering courses, or in your reading of other physics books, be sure to note which sign convention is being used for the first law.

Pitfall Prevention 20.8

The First Law With our approach to energy in this book, the first law of thermodynamics is a special case of Equation 8.2. Some physicists argue that the first law is the general equation for energy conservation, equivalent to Equation 8.2. In this approach, the first law is applied to a closed system (so that there is no matter transfer), heat is interpreted so as to include electromagnetic radiation, and work is interpreted so as to include electrical transmission (“electrical work”) and mechanical waves (“molecular work”). Keep that in mind if you run across the first law in your reading of other physics books.

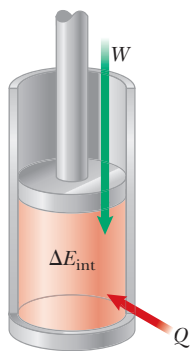


Figure 20.8 The first law of thermodynamics equates the change in internal energy E_{int} in a system to the net energy transfer to the system by heat Q and work W . In the situation shown here, the internal energy of the gas increases.

Look back at Equation 8.2 to see that the first law of thermodynamics is contained within that more general equation.

Let us investigate some special cases in which the first law can be applied. First, consider an *isolated system*, that is, one that does not interact with its surroundings, as we have seen before. In this case, no energy transfer by heat takes place and the work done on the system is zero; hence, the internal energy remains constant. That is, because $Q = W = 0$, it follows that $\Delta E_{\text{int}} = 0$; therefore, $E_{\text{int},i} = E_{\text{int},f}$. We conclude that the internal energy E_{int} of an isolated system remains constant.

Next, consider the case of a system that can exchange energy with its surroundings and is taken through a **cyclic process**, that is, a process that starts and ends at the same state. In this case, the change in the internal energy must again be zero because E_{int} is a state variable; therefore, the energy Q added to the system must equal the negative of the work W done on the system during the cycle. That is, in a cyclic process,

$$\Delta E_{\text{int}} = 0 \quad \text{and} \quad Q = -W \quad (\text{cyclic process})$$

On a PV diagram for a gas, a cyclic process appears as a closed curve. (The processes described in Figure 20.6 are represented by open curves because the initial and final states differ.) It can be shown that in a cyclic process for a gas, the net work done on the system per cycle equals the area enclosed by the path representing the process on a PV diagram.

20.6 Some Applications of the First Law of Thermodynamics

In this section, we consider additional applications of the first law to processes through which a gas is taken. As a model, let's consider the sample of gas contained in the piston–cylinder apparatus in Figure 20.8. This figure shows work being done on the gas and energy transferring in by heat, so the internal energy of the gas is rising. In the following discussion of various processes, refer back to this figure and mentally alter the directions of the transfer of energy to reflect what is happening in the process.

Before we apply the first law of thermodynamics to specific systems, it is useful to first define some idealized thermodynamic processes. An **adiabatic process** is one during which no energy enters or leaves the system by heat; that is, $Q = 0$. An adiabatic process can be achieved either by thermally insulating the walls of the system or by performing the process rapidly so that there is negligible time for energy to transfer by heat. Applying the first law of thermodynamics to an adiabatic process gives

$$\Delta E_{\text{int}} = W \quad (\text{adiabatic process}) \quad (20.11)$$

This result shows that if a gas is compressed adiabatically such that W is positive, then ΔE_{int} is positive and the temperature of the gas increases. Conversely, the temperature of a gas decreases when the gas expands adiabatically.

Adiabatic processes are very important in engineering practice. Some common examples are the expansion of hot gases in an internal combustion engine, the liquefaction of gases in a cooling system, and the compression stroke in a diesel engine.

The process described in Figures 20.7c and 20.7d, called an **adiabatic free expansion**, is unique. The process is adiabatic because it takes place in an insulated container. Because the gas expands into a vacuum, it does not apply a force on a piston as does the gas in Figures 20.7a and 20.7b, so no work is done on or by the gas. Therefore, in this adiabatic process, both $Q = 0$ and $W = 0$. As a result, $\Delta E_{\text{int}} = 0$ for this process as can be seen from the first law. That is, the initial and final internal energies of a gas are equal in an adiabatic free expansion. As we shall see

in Chapter 21, the internal energy of an ideal gas depends only on its temperature. Therefore, we expect no change in temperature during an adiabatic free expansion. This prediction is in accord with the results of experiments performed at low pressures. (Experiments performed at high pressures for real gases show a slight change in temperature after the expansion due to intermolecular interactions, which represent a deviation from the model of an ideal gas.)

A process that occurs at constant pressure is called an **isobaric process**. In Figure 20.8, an isobaric process could be established by allowing the piston to move freely so that it is always in equilibrium between the net force from the gas pushing upward and the weight of the piston plus the force due to atmospheric pressure pushing downward. The first process in Figure 20.6a and the second process in Figure 20.6b are both isobaric.

In such a process, the values of the heat and the work are both usually nonzero. The work done on the gas in an isobaric process is simply

$$W = -P(V_f - V_i) \quad (\text{isobaric process}) \quad (20.12)$$

◀ Isobaric process

where P is the constant pressure of the gas during the process.

A process that takes place at constant volume is called an **isovolumetric process**. In Figure 20.8, clamping the piston at a fixed position would ensure an isovolumetric process. The second process in Figure 20.6a and the first process in Figure 20.6b are both isovolumetric.

Because the volume of the gas does not change in such a process, the work given by Equation 20.9 is zero. Hence, from the first law we see that in an isovolumetric process, because $W = 0$,

$$\Delta E_{\text{int}} = Q \quad (\text{isovolumetric process}) \quad (20.13)$$

◀ Isovolumetric process

This expression specifies that if energy is added by heat to a system kept at constant volume, all the transferred energy remains in the system as an increase in its internal energy. For example, when a can of spray paint is thrown into a fire, energy enters the system (the gas in the can) by heat through the metal walls of the can. Consequently, the temperature, and therefore the pressure, in the can increases until the can possibly explodes.

A process that occurs at constant temperature is called an **isothermal process**. This process can be established by immersing the cylinder in Figure 20.8 in an ice–water bath or by putting the cylinder in contact with some other constant-temperature reservoir. A plot of P versus V at constant temperature for an ideal gas yields a hyperbolic curve called an *isotherm*. The internal energy of an ideal gas is a function of temperature only. Hence, because the temperature does not change in an isothermal process involving an ideal gas, we must have $\Delta E_{\text{int}} = 0$. For an isothermal process, we conclude from the first law that the energy transfer Q must be equal to the negative of the work done on the gas; that is, $Q = -W$. Any energy that enters the system by heat is transferred out of the system by work; as a result, no change in the internal energy of the system occurs in an isothermal process.

◀ Isothermal process

Quick Quiz 20.3 In the last three columns of the following table, fill in the boxes with the correct signs ($-$, $+$, or 0) for Q , W , and ΔE_{int} . For each situation, the system to be considered is identified.

Situation	System	Q	W	ΔE_{int}
(a) Rapidly pumping up a bicycle tire	Air in the pump			
(b) Pan of room-temperature water sitting on a hot stove	Water in the pan			
(c) Air quickly leaking out of a balloon	Air originally in the balloon			

Pitfall Prevention 20.9

$Q \neq 0$ in an Isothermal Process

Do not fall into the common trap of thinking there must be no transfer of energy by heat if the temperature does not change as is the case in an isothermal process. Because the cause of temperature change can be either heat *or* work, the temperature can remain constant even if energy enters the gas by heat, which can only happen if the energy entering the gas by heat leaves by work.

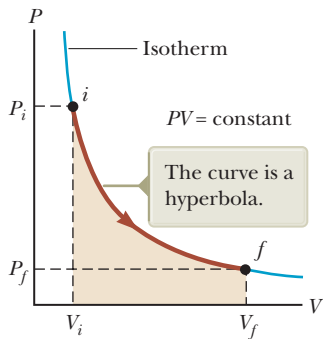


Figure 20.9 The PV diagram for an isothermal expansion of an ideal gas from an initial state to a final state.

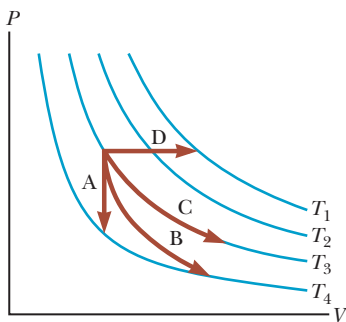


Figure 20.10 (Quick Quiz 20.4) Identify the nature of paths A, B, C, and D.

Isothermal Expansion of an Ideal Gas

Suppose an ideal gas is allowed to expand quasi-statically at constant temperature. This process is described by the PV diagram shown in Figure 20.9. The curve is a hyperbola (see Appendix B, Eq. B.23), and the ideal gas law (Eq. 19.8) with T constant indicates that the equation of this curve is $PV = nRT = \text{constant}$.

Let's calculate the work done on the gas in the expansion from state i to state f . The work done on the gas is given by Equation 20.9. Because the gas is ideal and the process is quasi-static, the ideal gas law is valid for each point on the path. Therefore,

$$W = - \int_{V_i}^{V_f} P dV = - \int_{V_i}^{V_f} \frac{nRT}{V} dV$$

Because T is constant in this case, it can be removed from the integral along with n and R :

$$W = -nRT \int_{V_i}^{V_f} \frac{dV}{V} = -nRT \ln V \Big|_{V_i}^{V_f}$$

To evaluate the integral, we used $\int(dx/x) = \ln x$. (See Appendix B.) Evaluating the result at the initial and final volumes gives

$$W = nRT \ln \left(\frac{V_i}{V_f} \right) \quad (20.14)$$

Numerically, this work W equals the negative of the shaded area under the PV curve shown in Figure 20.9. Because the gas expands, $V_f > V_i$ and the value for the work done on the gas is negative as we expect. If the gas is compressed, then $V_f < V_i$ and the work done on the gas is positive.

Quick Quiz 20.4 Characterize the paths in Figure 20.10 as isobaric, isochoric, isothermal, or adiabatic. For path B, $Q = 0$. The blue curves are isotherms.

Example 20.5 An Isothermal Expansion

A 1.0-mol sample of an ideal gas is kept at 0.0°C during an expansion from 3.0 L to 10.0 L.

(A) How much work is done on the gas during the expansion?

SOLUTION

Conceptualize Run the process in your mind: the cylinder in Figure 20.8 is immersed in an ice-water bath, and the piston moves outward so that the volume of the gas increases. You can also use the graphical representation in Figure 20.9 to conceptualize the process.

Categorize We will evaluate parameters using equations developed in the preceding sections, so we categorize this example as a substitution problem. Because the temperature of the gas is fixed, the process is isothermal.

Substitute the given values into Equation 20.14:

$$\begin{aligned} W &= nRT \ln \left(\frac{V_i}{V_f} \right) \\ &= (1.0 \text{ mol})(8.31 \text{ J/mol} \cdot \text{K})(273 \text{ K}) \ln \left(\frac{3.0 \text{ L}}{10.0 \text{ L}} \right) \\ &= -2.7 \times 10^3 \text{ J} \end{aligned}$$

(B) How much energy transfer by heat occurs between the gas and its surroundings in this process?

SOLUTION

Find the heat from the first law:

$$\begin{aligned} \Delta E_{\text{int}} &= Q + W \\ 0 &= Q + W \\ Q &= -W = 2.7 \times 10^3 \text{ J} \end{aligned}$$

► 20.5 continued

(C) If the gas is returned to the original volume by means of an isobaric process, how much work is done on the gas?

SOLUTION

Use Equation 20.12. The pressure is not given, so incorporate the ideal gas law:

$$\begin{aligned} W &= -P(V_f - V_i) = -\frac{nRT_i}{V_i}(V_f - V_i) \\ &= -\frac{(1.0 \text{ mol})(8.31 \text{ J/mol} \cdot \text{K})(273 \text{ K})}{10.0 \times 10^{-3} \text{ m}^3}(3.0 \times 10^{-3} \text{ m}^3 - 10.0 \times 10^{-3} \text{ m}^3) \\ &= \mathbf{1.6 \times 10^3 \text{ J}} \end{aligned}$$

We used the initial temperature and volume to calculate the work done because the final temperature was unknown. The work done on the gas is positive because the gas is being compressed.

Example 20.6 Boiling Water

Suppose 1.00 g of water vaporizes isobarically at atmospheric pressure ($1.013 \times 10^5 \text{ Pa}$). Its volume in the liquid state is $V_i = V_{\text{liquid}} = 1.00 \text{ cm}^3$, and its volume in the vapor state is $V_f = V_{\text{vapor}} = 1\,671 \text{ cm}^3$. Find the work done in the expansion and the change in internal energy of the system. Ignore any mixing of the steam and the surrounding air; imagine that the steam simply pushes the surrounding air out of the way.

SOLUTION

Conceptualize Notice that the temperature of the system does not change. There is a phase change occurring as the water evaporates to steam.

Categorize Because the expansion takes place at constant pressure, we categorize the process as isobaric. We will use equations developed in the preceding sections, so we categorize this example as a substitution problem.

Use Equation 20.12 to find the work done on the system as the air is pushed out of the way:

$$\begin{aligned} W &= -P(V_f - V_i) \\ &= -(1.013 \times 10^5 \text{ Pa})(1\,671 \times 10^{-6} \text{ m}^3 - 1.00 \times 10^{-6} \text{ m}^3) \\ &= \mathbf{-169 \text{ J}} \end{aligned}$$

Use Equation 20.7 and the latent heat of vaporization for water to find the energy transferred into the system by heat:

$$\begin{aligned} Q &= L_v \Delta m_s = m_s L_v = (1.00 \times 10^{-3} \text{ kg})(2.26 \times 10^6 \text{ J/kg}) \\ &= \mathbf{2\,260 \text{ J}} \end{aligned}$$

Use the first law to find the change in internal energy of the system:

$$\Delta E_{\text{int}} = Q + W = 2\,260 \text{ J} + (-169 \text{ J}) = \mathbf{2.09 \text{ kJ}}$$

The positive value for ΔE_{int} indicates that the internal energy of the system increases. The largest fraction of the energy ($2\,090 \text{ J} / 2\,260 \text{ J} = 93\%$) transferred to the liquid goes into increasing the internal energy of the system. The remaining 7% of the energy transferred leaves the system by work done by the steam on the surrounding atmosphere.

Example 20.7 Heating a Solid

A 1.0-kg bar of copper is heated at atmospheric pressure so that its temperature increases from 20°C to 50°C .

(A) What is the work done on the copper bar by the surrounding atmosphere?

SOLUTION

Conceptualize This example involves a solid, whereas the preceding two examples involved liquids and gases. For a solid, the change in volume due to thermal expansion is very small.

continued

▶ 20.7 continued

Categorize Because the expansion takes place at constant atmospheric pressure, we categorize the process as isobaric.

Analyze Find the work done on the copper bar using Equation 20.12:

$$W = -P \Delta V$$

Express the change in volume using Equation 19.6 and that $\beta = 3\alpha$:

$$W = -P(\beta V_i \Delta T) = -P(3\alpha V_i \Delta T) = -3\alpha P V_i \Delta T$$

Substitute for the volume in terms of the mass and density of the copper:

$$W = -3\alpha P \left(\frac{m}{\rho} \right) \Delta T$$

Substitute numerical values:

$$\begin{aligned} W &= -3[1.7 \times 10^{-5} (\text{°C})^{-1}](1.013 \times 10^5 \text{ N/m}^2) \left(\frac{1.0 \text{ kg}}{8.92 \times 10^3 \text{ kg/m}^3} \right) (50\text{°C} - 20\text{°C}) \\ &= -1.7 \times 10^{-2} \text{ J} \end{aligned}$$

Because this work is negative, work is done *by* the copper bar on the atmosphere.

(B) How much energy is transferred to the copper bar by heat?

SOLUTION

Use Equation 20.4 and the specific heat of copper from Table 20.1:

$$\begin{aligned} Q &= mc \Delta T = (1.0 \text{ kg})(387 \text{ J/kg} \cdot \text{°C})(50\text{°C} - 20\text{°C}) \\ &= 1.2 \times 10^4 \text{ J} \end{aligned}$$

(C) What is the increase in internal energy of the copper bar?

SOLUTION

Use the first law of thermodynamics:

$$\begin{aligned} \Delta E_{\text{int}} &= Q + W = 1.2 \times 10^4 \text{ J} + (-1.7 \times 10^{-2} \text{ J}) \\ &= 1.2 \times 10^4 \text{ J} \end{aligned}$$

Finalize Most of the energy transferred into the system by heat goes into increasing the internal energy of the copper bar. The fraction of energy used to do work on the surrounding atmosphere is only about 10^{-6} . Hence, when the thermal expansion of a solid or a liquid is analyzed, the small amount of work done on or by the system is usually ignored.

20.7 Energy Transfer Mechanisms in Thermal Processes

In Chapter 8, we introduced a global approach to the energy analysis of physical processes through Equation 8.1, $\Delta E_{\text{system}} = \Sigma T$, where T represents energy transfer, which can occur by several mechanisms. Earlier in this chapter, we discussed two of the terms on the right side of this equation, work W and heat Q . In this section, we explore more details about heat as a means of energy transfer and two other energy transfer methods often related to temperature changes: convection (a form of matter transfer T_{MT}) and electromagnetic radiation T_{ER} .

Thermal Conduction

The process of energy transfer by heat (Q in Eq. 8.2) can also be called **conduction** or **thermal conduction**. In this process, the transfer can be represented on an atomic scale as an exchange of kinetic energy between microscopic particles—molecules, atoms, and free electrons—in which less-energetic particles gain energy in collisions with more-energetic particles. For example, if you hold one end of a long metal bar and insert the other end into a flame, you will find that the temperature

of the metal in your hand soon increases. The energy reaches your hand by means of conduction. Initially, before the rod is inserted into the flame, the microscopic particles in the metal are vibrating about their equilibrium positions. As the flame raises the temperature of the rod, the particles near the flame begin to vibrate with greater and greater amplitudes. These particles, in turn, collide with their neighbors and transfer some of their energy in the collisions. Slowly, the amplitudes of vibration of metal atoms and electrons farther and farther from the flame increase until eventually those in the metal near your hand are affected. This increased vibration is detected by an increase in the temperature of the metal and of your potentially burned hand.

The rate of thermal conduction depends on the properties of the substance being heated. For example, it is possible to hold a piece of asbestos in a flame indefinitely, which implies that very little energy is conducted through the asbestos. In general, metals are good thermal conductors and materials such as asbestos, cork, paper, and fiberglass are poor conductors. Gases also are poor conductors because the separation distance between the particles is so great. Metals are good thermal conductors because they contain large numbers of electrons that are relatively free to move through the metal and so can transport energy over large distances. Therefore, in a good conductor such as copper, conduction takes place by means of both the vibration of atoms and the motion of free electrons.

Conduction occurs only if there is a difference in temperature between two parts of the conducting medium. Consider a slab of material of thickness Δx and cross-sectional area A . One face of the slab is at a temperature T_c , and the other face is at a temperature $T_h > T_c$ (Fig. 20.11). Experimentally, it is found that energy Q transfers in a time interval Δt from the hotter face to the colder one. The rate $P = Q/\Delta t$ at which this energy transfer occurs is found to be proportional to the cross-sectional area and the temperature difference $\Delta T = T_h - T_c$ and inversely proportional to the thickness:

$$P = \frac{Q}{\Delta t} \propto A \frac{\Delta T}{\Delta x}$$

Notice that P has units of watts when Q is in joules and Δt is in seconds. That is not surprising because P is power, the rate of energy transfer by heat. For a slab of infinitesimal thickness dx and temperature difference dT , we can write the **law of thermal conduction** as

$$P = kA \left| \frac{dT}{dx} \right| \quad (20.15)$$

where the proportionality constant k is the **thermal conductivity** of the material and $|dT/dx|$ is the **temperature gradient** (the rate at which temperature varies with position).

Substances that are good thermal conductors have large thermal conductivity values, whereas good thermal insulators have low thermal conductivity values. Table 20.3 lists thermal conductivities for various substances. Notice that metals are generally better thermal conductors than nonmetals.

Suppose a long, uniform rod of length L is thermally insulated so that energy cannot escape by heat from its surface except at the ends as shown in Figure 20.12 (page 610). One end is in thermal contact with an energy reservoir at temperature T_c , and the other end is in thermal contact with a reservoir at temperature $T_h > T_c$. When a steady state has been reached, the temperature at each point along the rod is constant in time. In this case, if we assume k is not a function of temperature, the temperature gradient is the same everywhere along the rod and is

$$\left| \frac{dT}{dx} \right| = \frac{T_h - T_c}{L}$$

The opposite faces are at different temperatures where $T_h > T_c$.

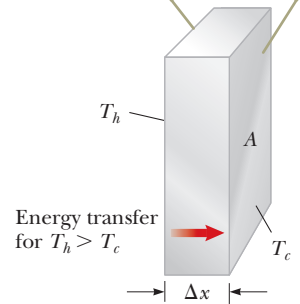


Figure 20.11 Energy transfer through a conducting slab with a cross-sectional area A and a thickness Δx .

Table 20.3

Thermal Conductivities

Substance	Thermal Conductivity (W/m · °C)
<i>Metals (at 25°C)</i>	
Aluminum	238
Copper	397
Gold	314
Iron	79.5
Lead	34.7
Silver	427
<i>Nonmetals (approximate values)</i>	
Asbestos	0.08
Concrete	0.8
Diamond	2 300
Glass	0.8
Ice	2
Rubber	0.2
Water	0.6
Wood	0.08
<i>Gases (at 20°C)</i>	
Air	0.023 4
Helium	0.138
Hydrogen	0.172
Nitrogen	0.023 4
Oxygen	0.023 8

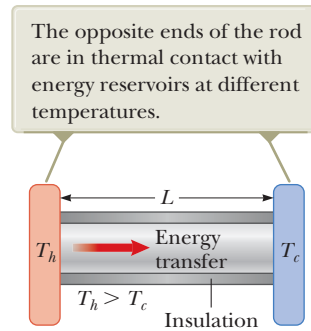


Figure 20.12 Conduction of energy through a uniform, insulated rod of length L .

Therefore, the rate of energy transfer by conduction through the rod is

$$P = kA \left(\frac{T_h - T_c}{L} \right) \quad (20.16)$$

For a compound slab containing several materials of thicknesses L_1, L_2, \dots and thermal conductivities k_1, k_2, \dots , the rate of energy transfer through the slab at steady state is

$$P = \frac{A(T_h - T_c)}{\sum_i (L_i/k_i)} \quad (20.17)$$

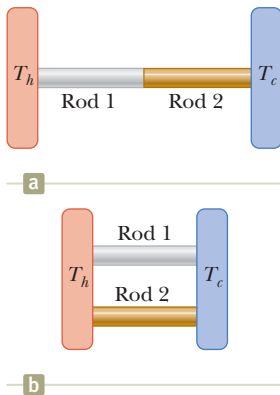


Figure 20.13 (Quick Quiz 20.5) In which case is the rate of energy transfer larger?

where T_h and T_c are the temperatures of the outer surfaces (which are held constant) and the summation is over all slabs. Example 20.8 shows how Equation 20.17 results from a consideration of two thicknesses of materials.

- Quick Quiz 20.5** You have two rods of the same length and diameter, but they are formed from different materials. The rods are used to connect two regions at different temperatures so that energy transfers through the rods by heat. They can be connected in series as in Figure 20.13a or in parallel as in Figure 20.13b. In which case is the rate of energy transfer by heat larger? (a) The rate is larger when the rods are in series. (b) The rate is larger when the rods are in parallel. (c) The rate is the same in both cases.

Example 20.8 Energy Transfer Through Two Slabs

Two slabs of thickness L_1 and L_2 and thermal conductivities k_1 and k_2 are in thermal contact with each other as shown in Figure 20.14. The temperatures of their outer surfaces are T_c and T_h , respectively, and $T_h > T_c$. Determine the temperature at the interface and the rate of energy transfer by conduction through an area A of the slabs in the steady-state condition.

SOLUTION

Conceptualize Notice the phrase “in the steady-state condition.” We interpret this phrase to mean that energy transfers through the compound slab at the same rate at all points. Otherwise, energy would be building up or disappearing at some point. Furthermore, the temperature varies with position in the two slabs, most likely at different rates in each part of the compound slab. When the system is in steady state, the interface is at some fixed temperature T .

Categorize We categorize this example as a thermal conduction problem and impose the condition that the power is the same in both slabs of material.

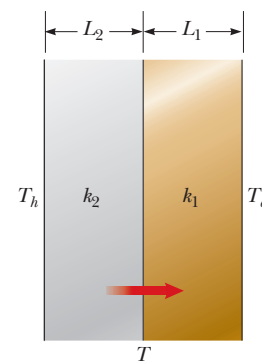


Figure 20.14 (Example 20.8) Energy transfer by conduction through two slabs in thermal contact with each other. At steady state, the rate of energy transfer through slab 1 equals the rate of energy transfer through slab 2.

► 20.8 continued

Analyze Use Equation 20.16 to express the rate at which energy is transferred through an area A of slab 1:

$$(1) P_1 = k_1 A \left(\frac{T - T_c}{L_1} \right)$$

Express the rate at which energy is transferred through the same area of slab 2:

$$(2) P_2 = k_2 A \left(\frac{T_h - T}{L_2} \right)$$

Set these two rates equal to represent the steady-state situation:

$$k_1 A \left(\frac{T - T_c}{L_1} \right) = k_2 A \left(\frac{T_h - T}{L_2} \right)$$

Solve for T :

$$(3) T = \frac{k_1 L_2 T_c + k_2 L_1 T_h}{k_1 L_2 + k_2 L_1}$$

Substitute Equation (3) into either Equation (1) or Equation (2):

$$(4) P = \frac{A(T_h - T_c)}{(L_1/k_1) + (L_2/k_2)}$$

Finalize Extension of this procedure to several slabs of materials leads to Equation 20.17.

WHAT IF? Suppose you are building an insulated container with two layers of insulation and the rate of energy transfer determined by Equation (4) turns out to be too high. You have enough room to increase the thickness of one of the two layers by 20%. How would you decide which layer to choose?

Answer To decrease the power as much as possible, you must increase the denominator in Equation (4) as much as possible. Whichever thickness you choose to increase, L_1 or L_2 , you increase the corresponding term L/k in the denominator by 20%. For this percentage change to represent the largest absolute change, you want to take 20% of the larger term. Therefore, you should increase the thickness of the layer that has the larger value of L/k .

Home Insulation

In engineering practice, the term L/k for a particular substance is referred to as the **R-value** of the material. Therefore, Equation 20.17 reduces to

$$P = \frac{A(T_h - T_c)}{\sum_i R_i} \quad (20.18)$$

where $R_i = L_i/k_i$. The R -values for a few common building materials are given in Table 20.4. In the United States, the insulating properties of materials used in buildings are usually expressed in U.S. customary units, not SI units. Therefore, in

Table 20.4 R-Values for Some Common Building Materials

Material	R-value (ft ² · °F · h/Btu)
Hardwood siding (1 in. thick)	0.91
Wood shingles (lapped)	0.87
Brick (4 in. thick)	4.00
Concrete block (filled cores)	1.93
Fiberglass insulation (3.5 in. thick)	10.90
Fiberglass insulation (6 in. thick)	18.80
Fiberglass board (1 in. thick)	4.35
Cellulose fiber (1 in. thick)	3.70
Flat glass (0.125 in. thick)	0.89
Insulating glass (0.25-in. space)	1.54
Air space (3.5 in. thick)	1.01
Stagnant air layer	0.17
Drywall (0.5 in. thick)	0.45
Sheathing (0.5 in. thick)	1.32

Table 20.4, R -values are given as a combination of British thermal units, feet, hours, and degrees Fahrenheit.

At any vertical surface open to the air, a very thin stagnant layer of air adheres to the surface. One must consider this layer when determining the R -value for a wall. The thickness of this stagnant layer on an outside wall depends on the speed of the wind. Energy transfer through the walls of a house on a windy day is greater than that on a day when the air is calm. A representative R -value for this stagnant layer of air is given in Table 20.4.

Example 20.9 The R -Value of a Typical Wall

Calculate the total R -value for a wall constructed as shown in Figure 20.15a. Starting outside the house (toward the front in the figure) and moving inward, the wall consists of 4 in. of brick, 0.5 in. of sheathing, an air space 3.5 in. thick, and 0.5 in. of drywall.

SOLUTION

Conceptualize Use Figure 20.15 to help conceptualize the structure of the wall. Do not forget the stagnant air layers inside and outside the house.

Categorize We will use specific equations developed in this section on home insulation, so we categorize this example as a substitution problem.

Use Table 20.4 to find the R -value of each layer:

$$R_1 \text{ (outside stagnant air layer)} = 0.17 \text{ ft}^2 \cdot \text{°F} \cdot \text{h/Btu}$$

$$R_2 \text{ (brick)} = 4.00 \text{ ft}^2 \cdot \text{°F} \cdot \text{h/Btu}$$

$$R_3 \text{ (sheathing)} = 1.32 \text{ ft}^2 \cdot \text{°F} \cdot \text{h/Btu}$$

$$R_4 \text{ (air space)} = 1.01 \text{ ft}^2 \cdot \text{°F} \cdot \text{h/Btu}$$

$$R_5 \text{ (drywall)} = 0.45 \text{ ft}^2 \cdot \text{°F} \cdot \text{h/Btu}$$

$$R_6 \text{ (inside stagnant air layer)} = 0.17 \text{ ft}^2 \cdot \text{°F} \cdot \text{h/Btu}$$

Add the R -values to obtain the total R -value for the wall:

$$R_{\text{total}} = R_1 + R_2 + R_3 + R_4 + R_5 + R_6 = 7.12 \text{ ft}^2 \cdot \text{°F} \cdot \text{h/Btu}$$

WHAT IF? Suppose you are not happy with this total R -value for the wall. You cannot change the overall structure, but you can fill the air space as in Figure 20.15b. To *maximize* the total R -value, what material should you choose to fill the air space?

Answer Looking at Table 20.4, we see that 3.5 in. of fiberglass insulation is more than ten times as effective as 3.5 in. of air. Therefore, we should fill the air space with fiberglass insulation. The result is that we add $10.90 \text{ ft}^2 \cdot \text{°F} \cdot \text{h/Btu}$ of R -value, and we lose $1.01 \text{ ft}^2 \cdot \text{°F} \cdot \text{h/Btu}$ due to the air space we have replaced. The new total R -value is equal to $7.12 \text{ ft}^2 \cdot \text{°F} \cdot \text{h/Btu} + 9.89 \text{ ft}^2 \cdot \text{°F} \cdot \text{h/Btu} = 17.01 \text{ ft}^2 \cdot \text{°F} \cdot \text{h/Btu}$.

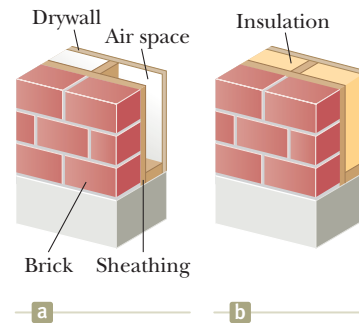


Figure 20.15 (Example 20.9) An exterior house wall containing (a) an air space and (b) insulation.

Convection

At one time or another, you probably have warmed your hands by holding them over an open flame. In this situation, the air directly above the flame is heated and expands. As a result, the density of this air decreases and the air rises. This hot air warms your hands as it flows by. Energy transferred by the movement of a warm substance is said to have been transferred by **convection**, which is a form of matter transfer, T_{MT} in Equation 8.2. When resulting from differences in density, as with air around a fire, the process is referred to as *natural convection*. Airflow at a beach

is an example of natural convection, as is the mixing that occurs as surface water in a lake cools and sinks (see Section 19.4). When the heated substance is forced to move by a fan or pump, as in some hot-air and hot-water heating systems, the process is called *forced convection*.

If it were not for convection currents, it would be very difficult to boil water. As water is heated in a teakettle, the lower layers are warmed first. This water expands and rises to the top because its density is lowered. At the same time, the denser, cool water at the surface sinks to the bottom of the kettle and is heated.

The same process occurs when a room is heated by a radiator. The hot radiator warms the air in the lower regions of the room. The warm air expands and rises to the ceiling because of its lower density. The denser, cooler air from above sinks, and the continuous air current pattern shown in Figure 20.16 is established.

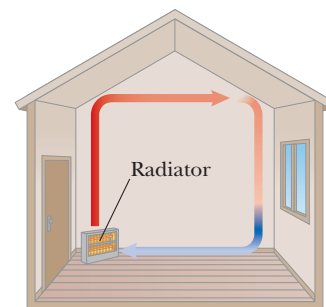


Figure 20.16 Convection currents are set up in a room warmed by a radiator.

Radiation

The third means of energy transfer we shall discuss is **thermal radiation**, T_{ER} in Equation 8.2. All objects radiate energy continuously in the form of electromagnetic waves (see Chapter 34) produced by thermal vibrations of the molecules. You are likely familiar with electromagnetic radiation in the form of the orange glow from an electric stove burner, an electric space heater, or the coils of a toaster.

The rate at which the surface of an object radiates energy is proportional to the fourth power of the absolute temperature of the surface. Known as **Stefan's law**, this behavior is expressed in equation form as

$$P = \sigma A e T^4 \quad (20.19)$$

◀ Stefan's law

where P is the power in watts of electromagnetic waves radiated from the surface of the object, σ is a constant equal to $5.6696 \times 10^{-8} \text{ W/m}^2 \cdot \text{K}^4$, A is the surface area of the object in square meters, e is the **emissivity**, and T is the surface temperature in kelvins. The value of e can vary between zero and unity depending on the properties of the surface of the object. The emissivity is equal to the **absorptivity**, which is the fraction of the incoming radiation that the surface absorbs. A mirror has very low absorptivity because it reflects almost all incident light. Therefore, a mirror surface also has a very low emissivity. At the other extreme, a black surface has high absorptivity and high emissivity. An **ideal absorber** is defined as an object that absorbs all the energy incident on it, and for such an object, $e = 1$. An object for which $e = 1$ is often referred to as a **black body**. We shall investigate experimental and theoretical approaches to radiation from a black body in Chapter 40.

Every second, approximately 1.370 J of electromagnetic radiation from the Sun passes perpendicularly through each 1 m^2 at the top of the Earth's atmosphere. This radiation is primarily visible and infrared light accompanied by a significant amount of ultraviolet radiation. We shall study these types of radiation in detail in Chapter 34. Enough energy arrives at the surface of the Earth each day to supply all our energy needs on this planet hundreds of times over, if only it could be captured and used efficiently. The growth in the number of solar energy-powered houses and proposals for solar energy "farms" in the United States reflects the increasing efforts being made to use this abundant energy.

What happens to the atmospheric temperature at night is another example of the effects of energy transfer by radiation. If there is a cloud cover above the Earth, the water vapor in the clouds absorbs part of the infrared radiation emitted by the Earth and re-emits it back to the surface. Consequently, temperature levels at the surface remain moderate. In the absence of this cloud cover, there is less in the way to prevent this radiation from escaping into space; therefore, the temperature decreases more on a clear night than on a cloudy one.

As an object radiates energy at a rate given by Equation 20.19, it also absorbs electromagnetic radiation from the surroundings, which consist of other objects

that radiate energy. If the latter process did not occur, an object would eventually radiate all its energy and its temperature would reach absolute zero. If an object is at a temperature T and its surroundings are at an average temperature T_0 , the net rate of energy gained or lost by the object as a result of radiation is

$$P_{\text{net}} = \sigma A e (T^4 - T_0^4) \quad (20.20)$$

When an object is in equilibrium with its surroundings, it radiates and absorbs energy at the same rate and its temperature remains constant. When an object is hotter than its surroundings, it radiates more energy than it absorbs and its temperature decreases.

The Dewar Flask

The *Dewar flask*⁶ is a container designed to minimize energy transfers by conduction, convection, and radiation. Such a container is used to store cold or hot liquids for long periods of time. (An insulated bottle, such as a Thermos, is a common household equivalent of a Dewar flask.) The standard construction (Fig. 20.17) consists of a double-walled Pyrex glass vessel with silvered walls. The space between the walls is evacuated to minimize energy transfer by conduction and convection. The silvered surfaces minimize energy transfer by radiation because silver is a very good reflector and has very low emissivity. A further reduction in energy loss is obtained by reducing the size of the neck. Dewar flasks are commonly used to store liquid nitrogen (boiling point 77 K) and liquid oxygen (boiling point 90 K).

To confine liquid helium (boiling point 4.2 K), which has a very low heat of vaporization, it is often necessary to use a double Dewar system in which the Dewar flask containing the liquid is surrounded by a second Dewar flask. The space between the two flasks is filled with liquid nitrogen.

Newer designs of storage containers use “superinsulation” that consists of many layers of reflecting material separated by fiberglass. All this material is in a vacuum, and no liquid nitrogen is needed with this design.

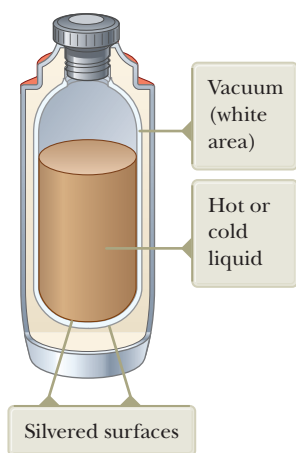


Figure 20.17 A cross-sectional view of a Dewar flask, which is used to store hot or cold substances.

⁶Invented by Sir James Dewar (1842–1923).

Summary

Definitions

■ **Internal energy** is a system’s energy associated with its temperature and its physical state (solid, liquid, gas). Internal energy includes kinetic energy of random translation, rotation, and vibration of molecules; vibrational potential energy within molecules; and potential energy between molecules.

Heat is the process of energy transfer across the boundary of a system resulting from a temperature difference between the system and its surroundings. The symbol Q represents the amount of energy transferred by this process.

■ A **calorie** is the amount of energy necessary to raise the temperature of 1 g of water from 14.5°C to 15.5°C.

The **heat capacity** C of any sample is the amount of energy needed to raise the temperature of the sample by 1°C.

The **specific heat** c of a substance is the heat capacity per unit mass:

$$c \equiv \frac{Q}{m \Delta T} \quad (20.3)$$

The **latent heat** of a substance is defined as the ratio of the energy input to a substance to the change in mass of the higher-phase material:

$$L \equiv \frac{Q}{\Delta m} \quad (20.6)$$

Concepts and Principles

The energy Q required to change the temperature of a mass m of a substance by an amount ΔT is

$$Q = mc \Delta T \quad (20.4)$$

where c is the specific heat of the substance.

The energy required to change the phase of a pure substance is

$$Q = L \Delta m \quad (20.7)$$

where L is the latent heat of the substance, which depends on the nature of the phase change and the substance, and Δm is the change in mass of the higher-phase material.

The **work** done on a gas as its volume changes from some initial value V_i to some final value V_f is

$$W = - \int_{V_i}^{V_f} P dV \quad (20.9)$$

where P is the pressure of the gas, which may vary during the process. To evaluate W , the process must be fully specified; that is, P and V must be known during each step. The work done depends on the path taken between the initial and final states.

The **first law of thermodynamics** is a specific reduction of the conservation of energy equation (Eq. 8.2) and states that when a system undergoes a change from one state to another, the change in its internal energy is

$$\Delta E_{\text{int}} = Q + W \quad (20.10)$$

where Q is the energy transferred into the system by heat and W is the work done on the system. Although Q and W both depend on the path taken from the initial state to the final state, the quantity ΔE_{int} does not depend on the path.

In a **cyclic process** (one that originates and terminates at the same state), $\Delta E_{\text{int}} = 0$ and therefore $Q = -W$. That is, the energy transferred into the system by heat equals the negative of the work done on the system during the process.

In an **adiabatic process**, no energy is transferred by heat between the system and its surroundings ($Q = 0$). In this case, the first law gives $\Delta E_{\text{int}} = W$. In the **adiabatic free expansion** of a gas, $Q = 0$ and $W = 0$, so $\Delta E_{\text{int}} = 0$. That is, the internal energy of the gas does not change in such a process.

An **isobaric process** is one that occurs at constant pressure. The work done on a gas in such a process is $W = -P(V_f - V_i)$.

An **isovolumetric process** is one that occurs at constant volume. No work is done in such a process, so $\Delta E_{\text{int}} = Q$.

An **isothermal process** is one that occurs at constant temperature. The work done on an ideal gas during an isothermal process is

$$W = nRT \ln \left(\frac{V_i}{V_f} \right) \quad (20.14)$$

Conduction can be viewed as an exchange of kinetic energy between colliding molecules or electrons. The rate of energy transfer by conduction through a slab of area A is

$$P = kA \left| \frac{dT}{dx} \right| \quad (20.15)$$

where k is the **thermal conductivity** of the material from which the slab is made and $|dT/dx|$ is the **temperature gradient**.

In **convection**, a warm substance transfers energy from one location to another.

All objects emit **thermal radiation** in the form of electromagnetic waves at the rate

$$P = \sigma A e T^4 \quad (20.19)$$

Objective Questions

1. denotes answer available in *Student Solutions Manual/Study Guide*

- An ideal gas is compressed to half its initial volume by means of several possible processes. Which of the following processes results in the most work done on the gas? (a) isothermal (b) adiabatic (c) isobaric (d) The work done is independent of the process.
- A poker is a stiff, nonflammable rod used to push burning logs around in a fireplace. For safety and comfort of use, should the poker be made from a material with (a) high specific heat and high thermal conductivity, (b) low specific heat and low thermal conductivity,

- (c) low specific heat and high thermal conductivity, or
(d) high specific heat and low thermal conductivity?
- Assume you are measuring the specific heat of a sample of originally hot metal by using a calorimeter containing water. Because your calorimeter is not perfectly insulating, energy can transfer by heat between the contents of the calorimeter and the room. To obtain the most accurate result for the specific heat of the metal, you should use water with which initial temperature? (a) slightly lower than room temperature (b) the same as room temperature (c) slightly higher than room temperature (d) whatever you like because the initial temperature makes no difference
 - An amount of energy is added to ice, raising its temperature from -10°C to -5°C . A larger amount of energy is added to the same mass of water, raising its temperature from 15°C to 20°C . From these results, what would you conclude? (a) Overcoming the latent heat of fusion of ice requires an input of energy. (b) The latent heat of fusion of ice delivers some energy to the system. (c) The specific heat of ice is less than that of water. (d) The specific heat of ice is greater than that of water. (e) More information is needed to draw any conclusion.
 - How much energy is required to raise the temperature of 5.00 kg of lead from 20.0°C to its melting point of 327°C ? The specific heat of lead is $128 \text{ J/kg} \cdot ^{\circ}\text{C}$. (a) $4.04 \times 10^5 \text{ J}$ (b) $1.07 \times 10^5 \text{ J}$ (c) $8.15 \times 10^4 \text{ J}$ (d) $2.13 \times 10^4 \text{ J}$ (e) $1.96 \times 10^5 \text{ J}$
 - Ethyl alcohol has about one-half the specific heat of water. Assume equal amounts of energy are transferred by heat into equal-mass liquid samples of alcohol and water in separate insulated containers. The water rises in temperature by 25°C . How much will the alcohol rise in temperature? (a) It will rise by 12°C . (b) It will rise by 25°C . (c) It will rise by 50°C . (d) It depends on the rate of energy transfer. (e) It will not rise in temperature.
 - The specific heat of substance A is greater than that of substance B. Both A and B are at the same initial temperature when equal amounts of energy are added to them. Assuming no melting or vaporization occurs, which of the following can be concluded about the final temperature T_A of substance A and the final temperature T_B of substance B? (a) $T_A > T_B$ (b) $T_A < T_B$ (c) $T_A = T_B$ (d) More information is needed.
 - Beryllium has roughly one-half the specific heat of water (H_2O). Rank the quantities of energy input required to produce the following changes from the largest to the smallest. In your ranking, note any cases of equality. (a) raising the temperature of 1 kg of H_2O from 20°C to 26°C (b) raising the temperature of 2 kg of H_2O from 20°C to 23°C (c) raising the temperature of 2 kg of H_2O from 1°C to 4°C (d) raising the temperature of 2 kg of beryllium from -1°C to 2°C (e) raising the temperature of 2 kg of H_2O from -1°C to 2°C
 - A person shakes a sealed insulated bottle containing hot coffee for a few minutes. (i) What is the change in the temperature of the coffee? (a) a large decrease (b) a slight decrease (c) no change (d) a slight increase (e) a large increase (ii) What is the change in the internal energy of the coffee? Choose from the same possibilities.
 - A 100-g piece of copper, initially at 95.0°C , is dropped into 200 g of water contained in a 280-g aluminum can; the water and can are initially at 15.0°C . What is the final temperature of the system? (Specific heats of copper and aluminum are 0.092 and $0.215 \text{ cal/g} \cdot ^{\circ}\text{C}$, respectively.) (a) 16°C (b) 18°C (c) 24°C (d) 26°C (e) none of those answers
 - Star A has twice the radius and twice the absolute surface temperature of star B. The emissivity of both stars can be assumed to be 1. What is the ratio of the power output of star A to that of star B? (a) 4 (b) 8 (c) 16 (d) 32 (e) 64
 - If a gas is compressed isothermally, which of the following statements is true? (a) Energy is transferred into the gas by heat. (b) No work is done on the gas. (c) The temperature of the gas increases. (d) The internal energy of the gas remains constant. (e) None of those statements is true.
 - When a gas undergoes an adiabatic expansion, which of the following statements is true? (a) The temperature of the gas does not change. (b) No work is done by the gas. (c) No energy is transferred to the gas by heat. (d) The internal energy of the gas does not change. (e) The pressure increases.
 - If a gas undergoes an isobaric process, which of the following statements is true? (a) The temperature of the gas doesn't change. (b) Work is done on or by the gas. (c) No energy is transferred by heat to or from the gas. (d) The volume of the gas remains the same. (e) The pressure of the gas decreases uniformly.
 - How long would it take a 1 000 W heater to melt 1.00 kg of ice at -20.0°C , assuming all the energy from the heater is absorbed by the ice? (a) 4.18 s (b) 41.8 s (c) 5.55 min (d) 6.25 min (e) 38.4 min

Conceptual Questions

1. denotes answer available in *Student Solutions Manual/Study Guide*

- Rub the palm of your hand on a metal surface for about 30 seconds. Place the palm of your other hand on an unrubbed portion of the surface and then on the rubbed portion. The rubbed portion will feel warmer. Now repeat this process on a wood surface. Why does the temperature difference between the rubbed and unrubbed portions of the wood surface seem larger than for the metal surface?
- You need to pick up a very hot cooking pot in your kitchen. You have a pair of cotton oven mitts. To pick up the pot most comfortably, should you soak them in cold water or keep them dry?
- What is wrong with the following statement: "Given any two bodies, the one with the higher temperature contains more heat."

4. Why is a person able to remove a piece of dry aluminum foil from a hot oven with bare fingers, whereas a burn results if there is moisture on the foil?
5. Using the first law of thermodynamics, explain why the total energy of an isolated system is always constant.
6. In 1801, Humphry Davy rubbed together pieces of ice inside an icehouse. He made sure that nothing in the environment was at a higher temperature than the rubbed pieces. He observed the production of drops of liquid water. Make a table listing this and other experiments or processes to illustrate each of the following situations. (a) A system can absorb energy by heat, increase in internal energy, and increase in temperature. (b) A system can absorb energy by heat and increase in internal energy without an increase in temperature. (c) A system can absorb energy by heat without increasing in temperature or in internal energy. (d) A system can increase in internal energy and in temperature without absorbing energy by heat. (e) A system can increase in internal energy without absorbing energy by heat or increasing in temperature.
7. It is the morning of a day that will become hot. You just purchased drinks for a picnic and are loading them, with ice, into a chest in the back of your car. (a) You wrap a wool blanket around the chest. Does doing so help to keep the beverages cool, or should you expect the wool blanket to warm them up? Explain your answer. (b) Your younger sister suggests you wrap her up in another wool blanket to keep her cool on the hot day like the ice chest. Explain your response to her.
8. In usually warm climates that experience a hard freeze, fruit growers will spray the fruit trees with water, hoping that a layer of ice will form on the fruit. Why would such a layer be advantageous?
9. Suppose you pour hot coffee for your guests, and one of them wants it with cream. He wants the coffee to be as warm as possible several minutes later when he drinks it. To have the warmest coffee, should the person add the cream just after the coffee is poured or just before drinking? Explain.
10. When camping in a canyon on a still night, a camper notices that as soon as the sun strikes the surrounding peaks, a breeze begins to stir. What causes the breeze?
11. Pioneers stored fruits and vegetables in underground cellars. In winter, why did the pioneers place an open barrel of water alongside their produce?
12. Is it possible to convert internal energy to mechanical energy? Explain with examples.

Problems

ENHANCED
WebAssign The problems found in this chapter may be assigned online in Enhanced WebAssign

1. straightforward; 2. intermediate; 3. challenging

1. full solution available in the *Student Solutions Manual/Study Guide*

AMT Analysis Model tutorial available in Enhanced WebAssign

GP Guided Problem

M Master It tutorial available in Enhanced WebAssign

W Watch It video solution available in Enhanced WebAssign

Section 20.1 Heat and Internal Energy

1. A 55.0-kg woman eats a 540 Calorie (540 kcal) jelly doughnut for breakfast. (a) How many joules of energy are the equivalent of one jelly doughnut? (b) How many steps must the woman climb on a very tall stairway to change the gravitational potential energy of the woman–Earth system by a value equivalent to the food energy in one jelly doughnut? Assume the height of a single stair is 15.0 cm. (c) If the human body is only 25.0% efficient in converting chemical potential energy to mechanical energy, how many steps must the woman climb to work off her breakfast?

Section 20.2 Specific Heat and Calorimetry

2. Consider Joule's apparatus described in Figure 20.1.

AMT The mass of each of the two blocks is 1.50 kg, and the **W** insulated tank is filled with 200 g of water. What is the increase in the water's temperature after the blocks fall through a distance of 3.00 m?

3. A combination of 0.250 kg of water at 20.0°C, 0.400 kg of aluminum at 26.0°C, and 0.100 kg of copper at 100°C is mixed in an insulated container and allowed to come to thermal equilibrium. Ignore any energy transfer to or from the container. What is the final temperature of the mixture?

4. The highest waterfall in the world is the Salto Angel in Venezuela. Its longest single falls has a height of 807 m. If water at the top of the falls is at 15.0°C, what is the maximum temperature of the water at the bottom of the falls? Assume all the kinetic energy of the water as it reaches the bottom goes into raising its temperature.

5. What mass of water at 25.0°C must be allowed to come to thermal equilibrium with a 1.85-kg cube of aluminum initially at 150°C to lower the temperature of the aluminum to 65.0°C? Assume any water turned to steam subsequently condenses.

6. The temperature of a silver bar rises by 10.0°C when it **M** absorbs 1.23 kJ of energy by heat. The mass of the bar is

525 g. Determine the specific heat of silver from these data.

7. In cold climates, including the northern United States, a house can be built with very large windows facing south to take advantage of solar heating. Sunlight shining in during the daytime is absorbed by the floor, interior walls, and objects in the room, raising their temperature to 38.0°C . If the house is well insulated, you may model it as losing energy by heat steadily at the rate $6\,000\text{ W}$ on a day in April when the average exterior temperature is 4°C and when the conventional heating system is not used at all. During the period between 5:00 p.m. and 7:00 a.m., the temperature of the house drops and a sufficiently large “thermal mass” is required to keep it from dropping too far. The thermal mass can be a large quantity of stone (with specific heat $850\text{ J/kg}\cdot^\circ\text{C}$) in the floor and the interior walls exposed to sunlight. What mass of stone is required if the temperature is not to drop below 18.0°C overnight?
8. A 50.0-g sample of copper is at 25.0°C . If $1\,200\text{ J}$ of energy is added to it by heat, what is the final temperature of the copper?
9. An aluminum cup of mass 200 g contains 800 g of water in thermal equilibrium at 80.0°C . The combination of cup and water is cooled uniformly so that the temperature decreases by 1.50°C per minute. At what rate is energy being removed by heat? Express your answer in watts.
10. If water with a mass m_h at temperature T_h is poured into an aluminum cup of mass m_{Al} containing mass m_c of water at T_c , where $T_h > T_c$, what is the equilibrium temperature of the system?
11. A 1.50-kg iron horseshoe initially at 600°C is dropped into a bucket containing 20.0 kg of water at 25.0°C . What is the final temperature of the water–horseshoe system? Ignore the heat capacity of the container and assume a negligible amount of water boils away.
12. An electric drill with a steel drill bit of mass $m = 27.0\text{ g}$ and diameter 0.635 cm is used to drill into a cubical steel block of mass $M = 240\text{ g}$. Assume steel has the same properties as iron. The cutting process can be modeled as happening at one point on the circumference of the bit. This point moves in a helix at constant tangential speed 40.0 m/s and exerts a force of constant magnitude 3.20 N on the block. As shown in Figure P20.12, a groove in the bit carries the chips up to the top of the block, where they form a pile around the hole. The drill is turned on and drills into the block for a time interval of 15.0 s . Let's assume this time interval is long enough for conduction within the steel to bring it all to a uniform temperature. Furthermore, assume the steel objects lose a negligible amount of energy by conduction, convection, and radiation into their environment. (a) Suppose the drill bit cuts three-quarters of the way through the block during 15.0 s . Find the temperature change of the whole quantity of steel. (b) **What If?** Now suppose the drill bit is dull and cuts only one-eighth of the way through the block in 15.0 s . Identify the temperature change of the whole quantity

of steel in this case. (c) What pieces of data, if any, are unnecessary for the solution? Explain.

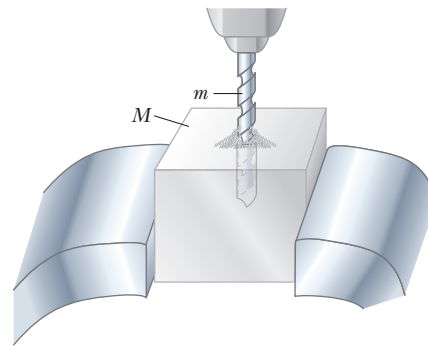


Figure P20.12

13. An aluminum calorimeter with a mass of 100 g contains 250 g of water. The calorimeter and water are in thermal equilibrium at 10.0°C . Two metallic blocks are placed into the water. One is a 50.0-g piece of copper at 80.0°C . The other has a mass of 70.0 g and is originally at a temperature of 100°C . The entire system stabilizes at a final temperature of 20.0°C . (a) Determine the specific heat of the unknown sample. (b) Using the data in Table 20.1, can you make a positive identification of the unknown material? Can you identify a possible material? (c) Explain your answers for part (b).
14. A 3.00-g copper coin at 25.0°C drops 50.0 m to the ground. (a) Assuming 60.0% of the change in gravitational potential energy of the coin–Earth system goes into increasing the internal energy of the coin, determine the coin's final temperature. (b) **What If?** Does the result depend on the mass of the coin? Explain.
15. Two thermally insulated vessels are connected by a narrow tube fitted with a valve that is initially closed as shown in Figure P20.15. One vessel of volume 16.8 L contains oxygen at a temperature of 300 K and a pressure of 1.75 atm . The other vessel of volume 22.4 L contains oxygen at a temperature of 450 K and a pressure of 2.25 atm . When the valve is opened, the gases in the two vessels mix and the temperature and pressure become uniform throughout. (a) What is the final temperature? (b) What is the final pressure?

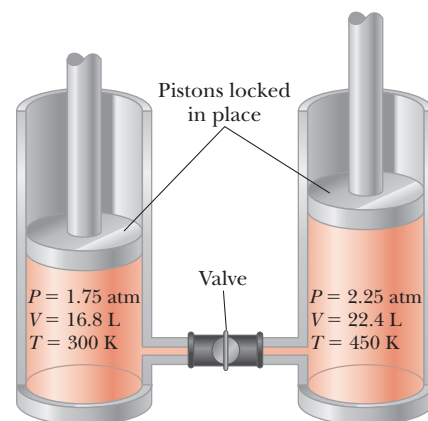


Figure P20.15

Section 20.3 Latent Heat

16. A 50.0-g copper calorimeter contains 250 g of water at 20.0°C. How much steam at 100°C must be condensed into the water if the final temperature of the system is to reach 50.0°C?

17. A 75.0-kg cross-country skier glides over snow as in Figure P20.17. The coefficient of friction between skis and snow is 0.200. Assume all the snow beneath his skis is at 0°C and that all the internal energy generated by friction is added to snow, which sticks to his skis until it melts. How far would he have to ski to melt 1.00 kg of snow?



iStockphoto.com/techemotr

Figure P20.17

18. How much energy is required to change a 40.0-g ice cube from ice at -10.0°C to steam at 110°C ?

19. A 75.0-g ice cube at 0°C is placed in 825 g of water at 25.0°C . What is the final temperature of the mixture?

20. A 3.00-g lead bullet at 30.0°C is fired at a speed of 240 m/s into a large block of ice at 0°C , in which it becomes embedded. What quantity of ice melts?

21. Steam at 100°C is added to ice at 0°C . (a) Find the amount of ice melted and the final temperature when the mass of steam is 10.0 g and the mass of ice is 50.0 g. (b) **What If?** Repeat when the mass of steam is 1.00 g and the mass of ice is 50.0 g.

22. A 1.00-kg block of copper at 20.0°C is dropped into a large vessel of liquid nitrogen at 77.3 K. How many kilograms of nitrogen boil away by the time the copper reaches 77.3 K? (The specific heat of copper is $0.0920 \text{ cal/g} \cdot ^\circ\text{C}$, and the latent heat of vaporization of nitrogen is 48.0 cal/g .)

23. In an insulated vessel, 250 g of ice at 0°C is added to 600 g of water at 18.0°C . (a) What is the final temperature of the system? (b) How much ice remains when the system reaches equilibrium?

24. An automobile has a mass of 1 500 kg, and its aluminum brakes have an overall mass of 6.00 kg. (a) Assume all the mechanical energy that transforms into internal energy when the car stops is deposited in the brakes and no energy is transferred out of the brakes by heat. The brakes are originally at 20.0°C . How many times can the car be stopped from 25.0 m/s before the brakes start to melt? (b) Identify some effects ignored in part (a) that are important in a more realistic assessment of the warming of the brakes.

Section 20.4 Work and Heat in Thermodynamic Processes

25. An ideal gas is enclosed in a cylinder with a movable piston on top of it. The piston has a mass of 8 000 g and an area of 5.00 cm^2 and is free to slide up and

down, keeping the pressure of the gas constant. How much work is done on the gas as the temperature of 0.200 mol of the gas is raised from 20.0°C to 300°C ?

26. An ideal gas is enclosed in a cylinder that has a movable piston on top. The piston has a mass m and an area A and is free to slide up and down, keeping the pressure of the gas constant. How much work is done on the gas as the temperature of n mol of the gas is raised from T_1 to T_2 ?

27. One mole of an ideal gas is warmed slowly so that it goes from the PV state (P_i, V_i) to $(3P_i, 3V_i)$ in such a way that the pressure of the gas is directly proportional to the volume. (a) How much work is done on the gas in the process? (b) How is the temperature of the gas related to its volume during this process?

28. (a) Determine the work done on a gas that expands from i to f as indicated in Figure P20.28. (b) **What If?** How much work is done on the gas if it is compressed from f to i along the same path?

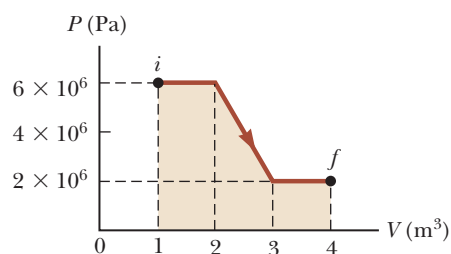


Figure P20.28

29. An ideal gas is taken through a quasi-static process described by $P = \alpha V^2$, with $\alpha = 5.00 \text{ atm/m}^6$, as shown in Figure P20.29. The gas is expanded to twice its original volume of 1.00 m^3 . How much work is done on the expanding gas in this process?

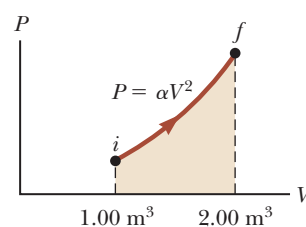
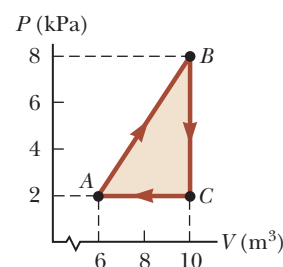


Figure P20.29

Section 20.5 The First Law of Thermodynamics

30. A gas is taken through the cyclic process described in Figure P20.30. (a) Find the net energy transferred to the system by heat during one complete cycle. (b) **What If?** If the cycle is reversed—that is, the process follows the path $ACBA$ —what is the net energy input per cycle by heat?

Figure P20.30
Problems 30 and 31.

31. Consider the cyclic process depicted in Figure P20.30. If Q is negative for the process BC and ΔE_{int} is negative for the process CA , what are the signs of Q , W , and ΔE_{int} that are associated with each of the three processes?
32. Why is the following situation impossible? An ideal gas undergoes a process with the following parameters: $Q = 10.0 \text{ J}$, $W = 12.0 \text{ J}$, and $\Delta T = -2.00^\circ\text{C}$.
33. A thermodynamic system undergoes a process in which its internal energy decreases by 500 J . Over the same time interval, 220 J of work is done on the system. Find the energy transferred from it by heat.
34. A sample of an ideal gas goes through the process shown in Figure P20.34. From A to B , the process is adiabatic; from B to C , it is isobaric with 345 kJ of energy entering the system by heat; from C to D , the process is isothermal; and from D to A , it is isobaric with 371 kJ of energy leaving the system by heat. Determine the difference in internal energy $E_{\text{int},B} - E_{\text{int},A}$.

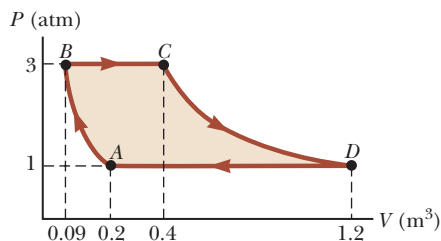


Figure P20.34

Section 20.6 Some Applications of the First Law of Thermodynamics

35. A 2.00-mol sample of helium gas initially at 300 K , and 0.400 atm is compressed isothermally to 1.20 atm . Noting that the helium behaves as an ideal gas, find (a) the final volume of the gas, (b) the work done on the gas, and (c) the energy transferred by heat.
36. (a) How much work is done on the steam when 1.00 mol of water at 100°C boils and becomes 1.00 mol of steam at 100°C at 1.00 atm pressure? Assume the steam to behave as an ideal gas. (b) Determine the change in internal energy of the system of the water and steam as the water vaporizes.
37. An ideal gas initially at 300 K undergoes an isobaric expansion at 2.50 kPa . If the volume increases from 1.00 m^3 to 3.00 m^3 and 12.5 kJ is transferred to the gas by heat, what are (a) the change in its internal energy and (b) its final temperature?
38. One mole of an ideal gas does $3\,000 \text{ J}$ of work on its surroundings as it expands isothermally to a final pressure of 1.00 atm and volume of 25.0 L . Determine (a) the initial volume and (b) the temperature of the gas.
39. A 1.00-kg block of aluminum is warmed at atmospheric pressure so that its temperature increases from 22.0°C to 40.0°C . Find (a) the work done on the aluminum, (b) the energy added to it by heat, and (c) the change in its internal energy.

40. In Figure P20.40, the change in internal energy of a gas that is taken from A to C along the blue path is $+800 \text{ J}$. The work done on the gas along the red path ABC is -500 J . (a) How much energy must be added to the system by heat as it goes from A through B to C ? (b) If the pressure at point A is five times that of point C , what is the work done on the system in going from C to D ? (c) What is the energy exchanged with the surroundings by heat as the gas goes from C to A along the green path? (d) If the change in internal energy in going from point D to point A is $+500 \text{ J}$, how much energy must be added to the system by heat as it goes from point C to point D ?

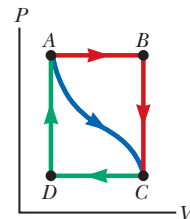


Figure P20.40

41. An ideal gas initially at P_i , V_i , and T_i is taken through a cycle as shown in Figure P20.41. (a) Find the net work done on the gas per cycle for 1.00 mol of gas initially at 0°C . (b) What is the net energy added by heat to the gas per cycle?

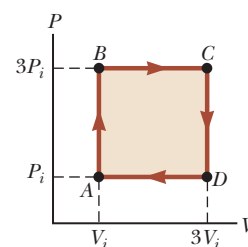


Figure P20.41

Problems 41 and 42.

42. An ideal gas initially at P_i , V_i , and T_i is taken through a cycle as shown in Figure P20.41. (a) Find the net work done on the gas per cycle. (b) What is the net energy added by heat to the system per cycle?

Section 20.7 Energy Transfer Mechanisms in Thermal Processes

43. A glass windowpane in a home is 0.620 cm thick and has dimensions of $1.00 \text{ m} \times 2.00 \text{ m}$. On a certain day, the temperature of the interior surface of the glass is 25.0°C and the exterior surface temperature is 0°C . (a) What is the rate at which energy is transferred by heat through the glass? (b) How much energy is transferred through the window in one day, assuming the temperatures on the surfaces remain constant?
44. A concrete slab is 12.0 cm thick and has an area of 5.00 m^2 . Electric heating coils are installed under the slab to melt the ice on the surface in the winter months. What minimum power must be supplied to the coils to maintain a temperature difference of 20.0°C between the bottom of the slab and its surface? Assume all the energy transferred is through the slab.
45. A student is trying to decide what to wear. His bedroom is at 20.0°C . His skin temperature is 35.0°C . The area of his exposed skin is 1.50 m^2 . People all over the world have skin that is dark in the infrared, with emissivity about 0.900 . Find the net energy transfer from his body by radiation in 10.0 min .
46. The surface of the Sun has a temperature of about $5\,800 \text{ K}$. The radius of the Sun is $6.96 \times 10^8 \text{ m}$. Calculate the total energy radiated by the Sun each second. Assume the emissivity of the Sun is 0.986 .

47. The tungsten filament of a certain 100-W lightbulb radiates 2.00 W of light. (The other 98 W is carried away by convection and conduction.) The filament has a surface area of 0.250 mm^2 and an emissivity of 0.950. Find the filament's temperature. (The melting point of tungsten is $3\,683 \text{ K}$.)
48. At high noon, the Sun delivers $1\,000 \text{ W}$ to each square meter of a blacktop road. If the hot asphalt transfers energy only by radiation, what is its steady-state temperature?
49. Two lightbulbs have cylindrical filaments much greater in length than in diameter. The evacuated bulbs are identical except that one operates at a filament temperature of $2\,100^\circ\text{C}$ and the other operates at $2\,000^\circ\text{C}$. (a) Find the ratio of the power emitted by the hotter lightbulb to that emitted by the cooler lightbulb. (b) With the bulbs operating at the same respective temperatures, the cooler lightbulb is to be altered by making its filament thicker so that it emits the same power as the hotter one. By what factor should the radius of this filament be increased?
50. The human body must maintain its core temperature inside a rather narrow range around 37°C . Metabolic processes, notably muscular exertion, convert chemical energy into internal energy deep in the interior. From the interior, energy must flow out to the skin or lungs to be expelled to the environment. During moderate exercise, an 80-kg man can metabolize food energy at the rate 300 kcal/h , do 60 kcal/h of mechanical work, and put out the remaining 240 kcal/h of energy by heat. Most of the energy is carried from the body interior out to the skin by forced convection (as a plumber would say), whereby blood is warmed in the interior and then cooled at the skin, which is a few degrees cooler than the body core. Without blood flow, living tissue is a good thermal insulator, with thermal conductivity about $0.210 \text{ W/m} \cdot ^\circ\text{C}$. Show that blood flow is essential to cool the man's body by calculating the rate of energy conduction in kcal/h through the tissue layer under his skin. Assume that its area is 1.40 m^2 , its thickness is 2.50 cm , and it is maintained at 37.0°C on one side and at 34.0°C on the other side.
51. **M** A copper rod and an aluminum rod of equal diameter are joined end to end in good thermal contact. The temperature of the free end of the copper rod is held constant at 100°C and that of the far end of the aluminum rod is held at 0°C . If the copper rod is 0.150 m long, what must be the length of the aluminum rod so that the temperature at the junction is 50.0°C ?
52. A box with a total surface area of 1.20 m^2 and a wall thickness of 4.00 cm is made of an insulating material. A 10.0-W electric heater inside the box maintains the inside temperature at 15.0°C above the outside temperature. Find the thermal conductivity k of the insulating material.
53. (a) Calculate the R -value of a thermal window made of two single panes of glass each 0.125 in. thick and separated by a 0.250-in. air space. (b) By what factor is the transfer of energy by heat through the window reduced

by using the thermal window instead of the single-pane window? Include the contributions of inside and outside stagnant air layers.

54. At our distance from the Sun, the intensity of solar radiation is $1\,370 \text{ W/m}^2$. The temperature of the Earth is affected by the *greenhouse effect* of the atmosphere. This phenomenon describes the effect of absorption of infrared light emitted by the surface so as to make the surface temperature of the Earth higher than if it were airless. For comparison, consider a spherical object of radius r with no atmosphere at the same distance from the Sun as the Earth. Assume its emissivity is the same for all kinds of electromagnetic waves and its temperature is uniform over its surface. (a) Explain why the projected area over which it absorbs sunlight is πr^2 and the surface area over which it radiates is $4\pi r^2$. (b) Compute its steady-state temperature. Is it chilly?

55. A bar of gold (Au) is in thermal contact with a bar of silver (Ag) of the same length and area (Fig. P20.55). One end of the compound bar is maintained at 80.0°C , and the opposite end is at 30.0°C . When the energy transfer reaches steady state, what is the temperature at the junction?

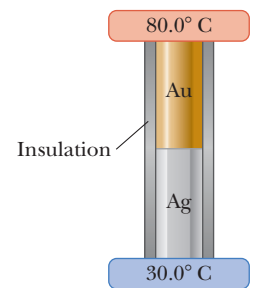


Figure P20.55

56. For bacteriological testing of water supplies and in medical clinics, samples must routinely be incubated for 24 h at 37°C . Peace Corps volunteer and MIT engineer Amy Smith invented a low-cost, low-maintenance incubator. The incubator consists of a foam-insulated box containing a waxy material that melts at 37.0°C interspersed among tubes, dishes, or bottles containing the test samples and growth medium (bacteria food). Outside the box, the waxy material is first melted by a stove or solar energy collector. Then the waxy material is put into the box to keep the test samples warm as the material solidifies. The heat of fusion of the phase-change material is 205 kJ/kg . Model the insulation as a panel with surface area 0.490 m^2 , thickness 4.50 cm , and conductivity $0.012\,0 \text{ W/m} \cdot ^\circ\text{C}$. Assume the exterior temperature is 23.0°C for 12.0 h and 16.0°C for 12.0 h . (a) What mass of the waxy material is required to conduct the bacteriological test? (b) Explain why your calculation can be done without knowing the mass of the test samples or of the insulation.
57. A large, hot pizza floats in outer space after being jettisoned as refuse from a spacecraft. What is the order of magnitude (a) of its rate of energy loss and (b) of its rate of temperature change? List the quantities you estimate and the value you estimate for each.

Additional Problems

58. A gas expands from I to F in Figure P20.58 (page 622). **M** The energy added to the gas by heat is 418 J when the gas goes from I to F along the diagonal path. (a) What is the change in internal energy of the gas? (b) How

much energy must be added to the gas by heat along the indirect path IAF ?

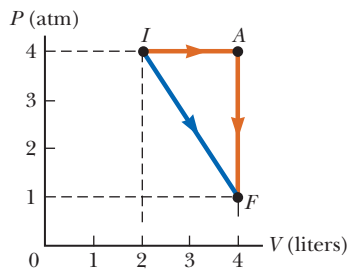


Figure P20.58

59. Gas in a container is at a pressure of 1.50 atm and a volume of 4.00 m³. What is the work done on the gas (a) if it expands at constant pressure to twice its initial volume, and (b) if it is compressed at constant pressure to one-quarter its initial volume?

60. Liquid nitrogen has a boiling point of 77.3 K and a latent heat of vaporization of 2.01×10^5 J/kg. A 25.0-W electric heating element is immersed in an insulated vessel containing 25.0 L of liquid nitrogen at its boiling point. How many kilograms of nitrogen are boiled away in a period of 4.00 h?

61. An aluminum rod 0.500 m in length and with a cross-sectional area of 2.50 cm² is inserted into a thermally insulated vessel containing liquid helium at 4.20 K. The rod is initially at 300 K. (a) If one-half of the rod is inserted into the helium, how many liters of helium boil off by the time the inserted half cools to 4.20 K? Assume the upper half does not yet cool. (b) If the circular surface of the upper end of the rod is maintained at 300 K, what is the approximate boil-off rate of liquid helium in liters per second after the lower half has reached 4.20 K? (Aluminum has thermal conductivity of 3100 W/m · K at 4.20 K; ignore its temperature variation. The density of liquid helium is 125 kg/m³.)

62. **Review.** Two speeding lead bullets, one of mass 12.0 g moving to the right at 300 m/s and one of mass 8.00 g moving to the left at 400 m/s, collide head-on, and all the material sticks together. Both bullets are originally at temperature 30.0°C. Assume the change in kinetic energy of the system appears entirely as increased internal energy. We would like to determine the temperature and phase of the bullets after the collision. (a) What two analysis models are appropriate for the system of two bullets for the time interval from before to after the collision? (b) From one of these models, what is the speed of the combined bullets after the collision? (c) How much of the initial kinetic energy has transformed to internal energy in the system after the collision? (d) Does all the lead melt due to the collision? (e) What is the temperature of the combined bullets after the collision? (f) What is the phase of the combined bullets after the collision?

63. A *flow calorimeter* is an apparatus used to measure the specific heat of a liquid. The technique of flow calorimetry involves measuring the temperature difference between the input and output points of a flowing

stream of the liquid while energy is added by heat at a known rate. A liquid of density 900 kg/m³ flows through the calorimeter with volume flow rate of 2.00 L/min. At steady state, a temperature difference 3.50°C is established between the input and output points when energy is supplied at the rate of 200 W. What is the specific heat of the liquid?

64. A *flow calorimeter* is an apparatus used to measure the specific heat of a liquid. The technique of flow calorimetry involves measuring the temperature difference between the input and output points of a flowing stream of the liquid while energy is added by heat at a known rate. A liquid of density ρ flows through the calorimeter with volume flow rate R . At steady state, a temperature difference ΔT is established between the input and output points when energy is supplied at the rate P . What is the specific heat of the liquid?

65. **Review.** Following a collision between a large spacecraft and an asteroid, a copper disk of radius 28.0 m and thickness 1.20 m at a temperature of 850°C is floating in space, rotating about its symmetry axis with an angular speed of 25.0 rad/s. As the disk radiates infrared light, its temperature falls to 20.0°C. No external torque acts on the disk. (a) Find the change in kinetic energy of the disk. (b) Find the change in internal energy of the disk. (c) Find the amount of energy it radiates.

66. An ice-cube tray is filled with 75.0 g of water. After the filled tray reaches an equilibrium temperature of 20.0°C, it is placed in a freezer set at -8.00°C to make ice cubes. (a) Describe the processes that occur as energy is being removed from the water to make ice. (b) Calculate the energy that must be removed from the water to make ice cubes at -8.00°C .

67. On a cold winter day, you buy roasted chestnuts from a street vendor. Into the pocket of your down parka you put the change he gives you: coins constituting 9.00 g of copper at -12.0°C . Your pocket already contains 14.0 g of silver coins at 30.0°C. A short time later the temperature of the copper coins is 4.00°C and is increasing at a rate of 0.500°C/s. At this time, (a) what is the temperature of the silver coins and (b) at what rate is it changing?

68. The rate at which a resting person converts food energy is called one's *basal metabolic rate* (BMR). Assume that the resulting internal energy leaves a person's body by radiation and convection of dry air. When you jog, most of the food energy you burn above your BMR becomes internal energy that would raise your body temperature if it were not eliminated. Assume that evaporation of perspiration is the mechanism for eliminating this energy. Suppose a person is jogging for "maximum fat burning," converting food energy at the rate 400 kcal/h above his BMR, and putting out energy by work at the rate 60.0 W. Assume that the heat of evaporation of water at body temperature is equal to its heat of vaporization at 100°C. (a) Determine the hourly rate at which water must evaporate from his skin. (b) When you metabolize fat, the hydrogen atoms

in the fat molecule are transferred to oxygen to form water. Assume that metabolism of 1.00 g of fat generates 9.00 kcal of energy and produces 1.00 g of water. What fraction of the water the jogger needs is provided by fat metabolism?

69. An iron plate is held against an iron wheel so that a kinetic friction force of 50.0 N acts between the two pieces of metal. The relative speed at which the two surfaces slide over each other is 40.0 m/s. (a) Calculate the rate at which mechanical energy is converted to internal energy. (b) The plate and the wheel each have a mass of 5.00 kg, and each receives 50.0% of the internal energy. If the system is run as described for 10.0 s and each object is then allowed to reach a uniform internal temperature, what is the resultant temperature increase?
70. A resting adult of average size converts chemical energy in food into internal energy at the rate 120 W, called her *basal metabolic rate*. To stay at constant temperature, the body must put out energy at the same rate. Several processes exhaust energy from your body. Usually, the most important is thermal conduction into the air in contact with your exposed skin. If you are not wearing a hat, a convection current of warm air rises vertically from your head like a plume from a smokestack. Your body also loses energy by electromagnetic radiation, by your exhaling warm air, and by evaporation of perspiration. In this problem, consider still another pathway for energy loss: moisture in exhaled breath. Suppose you breathe out 22.0 breaths per minute, each with a volume of 0.600 L. Assume you inhale dry air and exhale air at 37.0°C containing water vapor with a vapor pressure of 3.20 kPa. The vapor came from evaporation of liquid water in your body. Model the water vapor as an ideal gas. Assume its latent heat of evaporation at 37.0°C is the same as its heat of vaporization at 100°C. Calculate the rate at which you lose energy by exhaling humid air.
71. **M** A 40.0-g ice cube floats in 200 g of water in a 100-g copper cup; all are at a temperature of 0°C. A piece of lead at 98.0°C is dropped into the cup, and the final equilibrium temperature is 12.0°C. What is the mass of the lead?
72. One mole of an ideal gas is contained in a cylinder with a movable piston. The initial pressure, volume, and temperature are P_i , V_i , and T_i , respectively. Find the work done on the gas in the following processes. In operational terms, describe how to carry out each process and show each process on a PV diagram. (a) an isobaric compression in which the final volume is one-half the initial volume (b) an isothermal compression in which the final pressure is four times the initial pressure (c) an isovolumetric process in which the final pressure is three times the initial pressure
73. **Review.** A 670-kg meteoroid happens to be composed of aluminum. When it is far from the Earth, its temperature is -15.0°C and it moves at 14.0 km/s relative to the planet. As it crashes into the Earth, assume the internal energy transformed from the mechanical energy of the meteoroid–Earth system is shared equally between the meteoroid and the Earth and all the mate-

rial of the meteoroid rises momentarily to the same final temperature. Find this temperature. Assume the specific heat of liquid and of gaseous aluminum is $1\,170\text{ J/kg}\cdot^\circ\text{C}$.

74. *Why is the following situation impossible?* A group of campers arises at 8:30 a.m. and uses a solar cooker, which consists of a curved, reflecting surface that concentrates sunlight onto the object to be warmed (Fig. P20.74). During the day, the maximum solar intensity reaching the Earth's surface at the cooker's location is $I = 600\text{ W/m}^2$. The cooker faces the Sun and has a face diameter of $d = 0.600\text{ m}$. Assume a fraction f of 40.0% of the incident energy is transferred to 1.50 L of water in an open container, initially at 20.0°C. The water comes to a boil, and the campers enjoy hot coffee for breakfast before hiking ten miles and returning by noon for lunch.



Figure P20.74

75. During periods of high activity, the Sun has more sunspots than usual. Sunspots are cooler than the rest of the luminous layer of the Sun's atmosphere (the photosphere). Paradoxically, the total power output of the active Sun is not lower than average but is the same or slightly higher than average. Work out the details of the following crude model of this phenomenon. Consider a patch of the photosphere with an area of $5.10 \times 10^{14}\text{ m}^2$. Its emissivity is 0.965. (a) Find the power it radiates if its temperature is uniformly 5 800 K, corresponding to the quiet Sun. (b) To represent a sunspot, assume 10.0% of the patch area is at 4 800 K and the other 90.0% is at 5 890 K. Find the power output of the patch. (c) State how the answer to part (b) compares with the answer to part (a). (d) Find the average temperature of the patch. Note that this cooler temperature results in a higher power output.
76. (a) In air at 0°C, a 1.60-kg copper block at 0°C is set sliding at 2.50 m/s over a sheet of ice at 0°C. Friction brings the block to rest. Find the mass of the ice that melts. (b) As the block slows down, identify its energy input Q , its change in internal energy ΔE_{int} , and the change in mechanical energy for the block–ice system. (c) For the ice as a system, identify its energy input Q and its change in internal energy ΔE_{int} . (d) A 1.60-kg block of ice at 0°C is set sliding at 2.50 m/s over a sheet of copper at 0°C. Friction brings the block to rest. Find the mass of the ice that melts. (e) Evaluate Q and ΔE_{int} for the block of ice as a system and ΔE_{mech} for the block–ice system. (f) Evaluate Q and ΔE_{int} for the metal

sheet as a system. (g) A thin, 1.60-kg slab of copper at 20°C is set sliding at 2.50 m/s over an identical stationary slab at the same temperature. Friction quickly stops the motion. Assuming no energy is transferred to the environment by heat, find the change in temperature of both objects. (h) Evaluate Q and ΔE_{int} for the sliding slab and ΔE_{mech} for the two-slab system. (i) Evaluate Q and ΔE_{int} for the stationary slab.

77. Water in an electric teakettle is boiling. The power absorbed by the water is 1.00 kW. Assuming the pressure of vapor in the kettle equals atmospheric pressure, determine the speed of effusion of vapor from the kettle's spout if the spout has a cross-sectional area of 2.00 cm². Model the steam as an ideal gas.

78. The average thermal conductivity of the walls (including the windows) and roof of the house depicted in Figure P20.78 is 0.480 W/m · °C, and their average thickness is 21.0 cm. The house is kept warm with natural gas having a heat of combustion (that is, the energy provided per cubic meter of gas burned) of 9 300 kcal/m³. How many cubic meters of gas must be burned each day to maintain an inside temperature of 25.0°C if the outside temperature is 0.0°C? Disregard radiation and the energy transferred by heat through the ground.

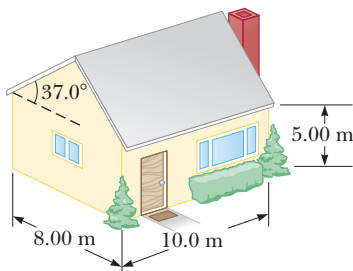


Figure P20.78

79. A cooking vessel on a slow burner contains 10.0 kg of water and an unknown mass of ice in equilibrium at 0°C at time $t = 0$. The temperature of the mixture is measured at various times, and the result is plotted in Figure P20.79. During the first 50.0 min, the mixture remains at 0°C. From 50.0 min to 60.0 min, the temperature increases to 2.00°C. Ignoring the heat capacity of the vessel, determine the initial mass of the ice.

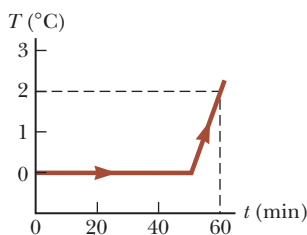


Figure P20.79

80. A student measures the following data in a calorimetry experiment designed to determine the specific heat of aluminum:

Initial temperature of water and calorimeter:	70.0°C
---	--------

Mass of water:	0.400 kg
Mass of calorimeter:	0.040 kg
Specific heat of calorimeter:	0.63 kJ/kg · °C
Initial temperature of aluminum:	27.0°C
Mass of aluminum:	0.200 kg
Final temperature of mixture:	66.3°C

(a) Use these data to determine the specific heat of aluminum. (b) Explain whether your result is within 15% of the value listed in Table 20.1.

Challenge Problems

81. Consider the piston-cylinder apparatus shown in Figure P20.81. The bottom of the cylinder contains 2.00 kg of water at just under 100.0°C. The cylinder has a radius of $r = 7.50$ cm. The piston of mass $m = 3.00$ kg sits on the surface of the water. An electric heater in the cylinder base transfers energy into the water at a rate of 100 W. Assume the cylinder is much taller than shown in the figure, so we don't need to be concerned about the piston reaching the top of the cylinder. (a) Once the water begins boiling, how fast is the piston rising? Model the steam as an ideal gas. (b) After the water has completely turned to steam and the heater continues to transfer energy to the steam at the same rate, how fast is the piston rising?

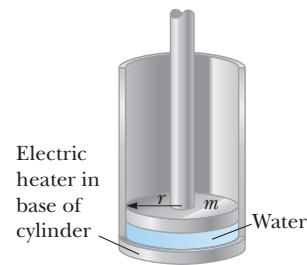


Figure P20.81

82. A spherical shell has inner radius 3.00 cm and outer radius 7.00 cm. It is made of material with thermal conductivity $k = 0.800$ W/m · °C. The interior is maintained at temperature 5°C and the exterior at 40°C. After an interval of time, the shell reaches a steady state with the temperature at each point within it remaining constant in time. (a) Explain why the rate of energy transfer P must be the same through each spherical surface, of radius r , within the shell and must satisfy

$$\frac{dT}{dr} = \frac{P}{4\pi kr^2}$$

(b) Next, prove that

$$\int_5^{40} dT = \frac{P}{4\pi k} \int_{0.03}^{0.07} r^{-2} dr$$

where T is in degrees Celsius and r is in meters. (c) Find the rate of energy transfer through the shell. (d) Prove that

$$\int_5^T dT = 1.84 \int_{0.03}^r r^{-2} dr$$

where T is in degrees Celsius and r is in meters. (e) Find the temperature within the shell as a function of radius. (f) Find the temperature at $r = 5.00$ cm, halfway through the shell.

83. A pond of water at 0°C is covered with a layer of ice 4.00 cm thick. If the air temperature stays constant at -10.0°C , what time interval is required for the ice thickness to increase to 8.00 cm? *Suggestion:* Use Equation 20.16 in the form

$$\frac{dQ}{dt} = kA \frac{\Delta T}{x}$$

and note that the incremental energy dQ extracted from the water through the thickness x of ice is the amount required to freeze a thickness dx of ice. That is, $dQ = L_f \rho A dx$, where ρ is the density of the ice, A is the area, and L_f is the latent heat of fusion.

84. (a) The inside of a hollow cylinder is maintained at a temperature T_a , and the outside is at a lower temperature, T_b (Fig. P20.84). The wall of the cylinder has a thermal conductivity k . Ignoring end effects, show that the rate of energy conduction from the inner surface to the outer surface in the radial direction is

$$\frac{dQ}{dt} = 2\pi Lk \left[\frac{T_a - T_b}{\ln(b/a)} \right]$$

Suggestions: The temperature gradient is dT/dr . A radial energy current passes through a concentric cylinder of area $2\pi rL$. (b) The passenger section of a jet airliner is in the shape of a cylindrical tube with a length of 35.0 m and an inner radius of 2.50 m. Its walls are lined with an insulating material 6.00 cm in thickness and having a thermal conductivity of $4.00 \times 10^{-5} \text{ cal/s} \cdot \text{cm} \cdot ^\circ\text{C}$. A heater must maintain the interior temperature at 25.0°C while the outside temperature is -35.0°C . What power must be supplied to the heater?

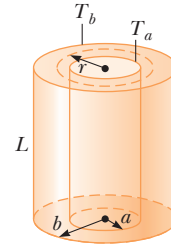


Figure P20.84

The Kinetic Theory of Gases

- 21.1 Molecular Model of an Ideal Gas
- 21.2 Molar Specific Heat of an Ideal Gas
- 21.3 The Equipartition of Energy
- 21.4 Adiabatic Processes for an Ideal Gas
- 21.5 Distribution of Molecular Speeds



A boy inflates his bicycle tire with a hand-operated pump. Kinetic theory helps to describe the details of the air in the pump. (© Cengage Learning/George Semple)

In Chapter 19, we discussed the properties of an ideal gas by using such macroscopic variables as pressure, volume, and temperature. Such large-scale properties can be related to a description on a microscopic scale, where matter is treated as a collection of molecules. Applying Newton's laws of motion in a statistical manner to a collection of particles provides a reasonable description of thermodynamic processes. To keep the mathematics relatively simple, we shall consider primarily the behavior of gases because in gases the interactions between molecules are much weaker than they are in liquids or solids.

We shall begin by relating pressure and temperature directly to the details of molecular motion in a sample of gas. Based on these results, we will make predictions of molar specific heats of gases. Some of these predictions will be correct and some will not. We will extend our model to explain those values that are not predicted correctly by the simpler model. Finally, we discuss the distribution of molecular speeds in a gas.

21.1 Molecular Model of an Ideal Gas

In this chapter, we will investigate a *structural model* for an ideal gas. A **structural model** is a theoretical construct designed to represent a system that cannot be observed directly because it is too large or too small. For example, we can only observe the solar system from the inside; we cannot travel outside the solar system and look back to see how it works. This restricted vantage point has led to different historical structural models of the solar system: the *geocentric model*, with the Earth at the center, and the *heliocentric model*, with the Sun at the center. Of course, the latter has been shown to be correct. An example of a system too small to observe directly is the hydrogen atom. Various structural models of this system have been developed, including the *Bohr model* (Section 42.3) and the *quantum model* (Section 42.4). Once a structural model is developed, various predictions are made for experimental observations. For example, the geocentric model of the solar system makes predictions of how the movement of Mars should appear from the Earth. It turns out that those predictions do not match the actual observations. When that occurs with a structural model, the model must be modified or replaced with another model.

The structural model that we will develop for an ideal gas is called **kinetic theory**. This model treats an ideal gas as a collection of molecules with the following properties:

1. *Physical components:*

The gas consists of a number of identical molecules within a cubic container of side length d . The number of molecules in the gas is large, and the average separation between them is large compared with their dimensions. Therefore, the molecules occupy a negligible volume in the container. This assumption is consistent with the ideal gas model, in which we imagine the molecules to be point-like.

2. *Behavior of the components:*

- The molecules obey Newton's laws of motion, but as a whole their motion is isotropic: any molecule can move in any direction with any speed.
- The molecules interact only by short-range forces during elastic collisions. This assumption is consistent with the ideal gas model, in which the molecules exert no long-range forces on one another.
- The molecules make elastic collisions with the walls.

Although we often picture an ideal gas as consisting of single atoms, the behavior of molecular gases approximates that of ideal gases rather well at low pressures. Usually, molecular rotations or vibrations have no effect on the motions considered here.

For our first application of kinetic theory, let us relate the macroscopic variable of pressure P to microscopic quantities. Consider a collection of N molecules of an ideal gas in a container of volume V . As indicated above, the container is a cube with edges of length d (Fig. 21.1). We shall first focus our attention on one of these molecules of mass m_0 and assume it is moving so that its component of velocity in the x direction is v_{xi} as in Figure 21.2. (The subscript i here refers to the i th molecule in the collection, not to an initial value. We will combine the effects of all the molecules shortly.) As the molecule collides elastically with any wall (property 2(c) above), its velocity component perpendicular to the wall is reversed because the mass of the wall is far greater than the mass of the molecule. The molecule is modeled as a nonisolated system for which the impulse from the wall causes a change in the molecule's momentum. Because the momentum component p_{xi} of the molecule is m_0v_{xi} before the collision and $-m_0v_{xi}$ after the collision, the change in the x component of the momentum of the molecule is

$$\Delta p_{xi} = -m_0v_{xi} - (m_0v_{xi}) = -2m_0v_{xi} \quad (21.1)$$

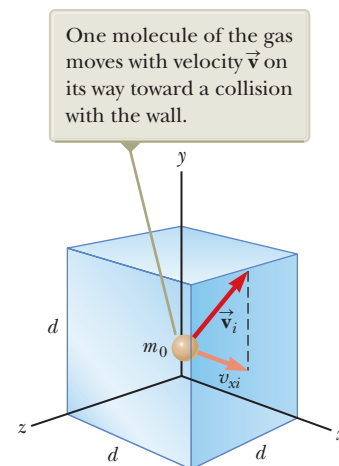


Figure 21.1 A cubical box with sides of length d containing an ideal gas.

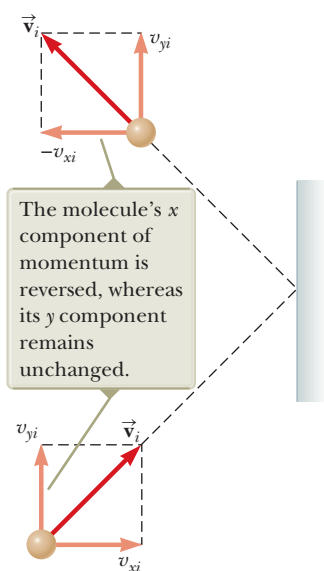


Figure 21.2 A molecule makes an elastic collision with the wall of the container. In this construction, we assume the molecule moves in the xy plane.

From the nonisolated system model for momentum, we can apply the impulse-momentum theorem (Eqs. 9.11 and 9.13) to the molecule to give

$$\bar{F}_{i,\text{on molecule}} \Delta t_{\text{collision}} = \Delta p_{xi} = -2m_0 v_{xi} \quad (21.2)$$

where $\bar{F}_{i,\text{on molecule}}$ is the x component of the average force¹ the wall exerts on the molecule during the collision and $\Delta t_{\text{collision}}$ is the duration of the collision. For the molecule to make another collision with the same wall after this first collision, it must travel a distance of $2d$ in the x direction (across the cube and back). Therefore, the time interval between two collisions with the same wall is

$$\Delta t = \frac{2d}{v_{xi}} \quad (21.3)$$

The force that causes the change in momentum of the molecule in the collision with the wall occurs only during the collision. We can, however, find the long-term average force for many back-and-forth trips across the cube by averaging the force in Equation 21.2 over the time interval for the molecule to move across the cube and back once, Equation 21.3. The average change in momentum per trip for the time interval for many trips is the same as that for the short duration of the collision. Therefore, we can rewrite Equation 21.2 as

$$\bar{F}_i \Delta t = -2m_0 v_{xi} \quad (21.4)$$

where \bar{F}_i is the average force component over the time interval for the molecule to move across the cube and back. Because exactly one collision occurs for each such time interval, this result is also the long-term average force on the molecule over long time intervals containing any number of multiples of Δt .

Equation 21.3 and 21.4 enable us to express the x component of the long-term average force exerted by the wall on the molecule as

$$\bar{F}_i = -\frac{2m_0 v_{xi}}{\Delta t} = -\frac{2m_0 v_{xi}^2}{2d} = -\frac{m_0 v_{xi}^2}{d} \quad (21.5)$$

Now, by Newton's third law, the x component of the long-term average force exerted by the *molecule* on the *wall* is equal in magnitude and opposite in direction:

$$\bar{F}_{i,\text{on wall}} = -\bar{F}_i = -\left(-\frac{m_0 v_{xi}^2}{d}\right) = \frac{m_0 v_{xi}^2}{d} \quad (21.6)$$

The total average force \bar{F} exerted by the gas on the wall is found by adding the average forces exerted by the individual molecules. Adding terms such as those in Equation 21.6 for all molecules gives

$$\bar{F} = \sum_{i=1}^N \frac{m_0 v_{xi}^2}{d} = \frac{m_0}{d} \sum_{i=1}^N v_{xi}^2 \quad (21.7)$$

where we have factored out the length of the box and the mass m_0 because property 1 tells us that all the molecules are the same. We now impose an additional feature from property 1, that the number of molecules is large. For a small number of molecules, the actual force on the wall would vary with time. It would be nonzero during the short interval of a collision of a molecule with the wall and zero when no molecule happens to be hitting the wall. For a very large number of molecules such as Avogadro's number, however, these variations in force are smoothed out so that the average force given above is the same over *any* time interval. Therefore, the *constant* force F on the wall due to the molecular collisions is

$$F = \frac{m_0}{d} \sum_{i=1}^N v_{xi}^2 \quad (21.8)$$

¹For this discussion, we use a bar over a variable to represent the average value of the variable, such as \bar{F} for the average force, rather than the subscript "avg" that we have used before. This notation is to save confusion because we already have a number of subscripts on variables.

To proceed further, let's consider how to express the average value of the square of the x component of the velocity for N molecules. The traditional average of a set of values is the sum of the values over the number of values:

$$\overline{v_x^2} = \frac{\sum_{i=1}^N v_{xi}^2}{N} \rightarrow \sum_{i=1}^N v_{xi}^2 = N\overline{v_x^2} \quad (21.9)$$

Using Equation 21.9 to substitute for the sum in Equation 21.8 gives

$$F = \frac{m_0}{d} N\overline{v_x^2} \quad (21.10)$$

Now let's focus again on one molecule with velocity components v_{xi} , v_{yi} , and v_{zi} . The Pythagorean theorem relates the square of the speed of the molecule to the squares of the velocity components:

$$v_i^2 = v_{xi}^2 + v_{yi}^2 + v_{zi}^2 \quad (21.11)$$

Hence, the average value of v^2 for all the molecules in the container is related to the average values of v_x^2 , v_y^2 , and v_z^2 according to the expression

$$\overline{v^2} = \overline{v_x^2} + \overline{v_y^2} + \overline{v_z^2} \quad (21.12)$$

Because the motion is isotropic (property 2(a) above), the average values $\overline{v_x^2}$, $\overline{v_y^2}$, and $\overline{v_z^2}$ are equal to one another. Using this fact and Equation 21.12, we find that

$$\overline{v^2} = 3\overline{v_x^2} \quad (21.13)$$

Therefore, from Equation 21.10, the total force exerted on the wall is

$$F = \frac{1}{3}N \frac{m_0\overline{v^2}}{d} \quad (21.14)$$

Using this expression, we can find the total pressure exerted on the wall:

$$P = \frac{F}{A} = \frac{F}{d^2} = \frac{1}{3}N \frac{m_0\overline{v^2}}{d^3} = \frac{1}{3}\left(\frac{N}{V}\right)m_0\overline{v^2}$$

$$P = \frac{2}{3}\left(\frac{N}{V}\right)\left(\frac{1}{2}m_0\overline{v^2}\right) \quad (21.15)$$

◀ Relationship between pressure and molecular kinetic energy

where we have recognized the volume V of the cube as d^3 .

Equation 21.15 indicates that the pressure of a gas is proportional to (1) the number of molecules per unit volume and (2) the average translational kinetic energy of the molecules, $\frac{1}{2}m_0\overline{v^2}$. In analyzing this structural model of an ideal gas, we obtain an important result that relates the macroscopic quantity of pressure to a microscopic quantity, the average value of the square of the molecular speed. Therefore, a key link between the molecular world and the large-scale world has been established.

Notice that Equation 21.15 verifies some features of pressure with which you are probably familiar. One way to increase the pressure inside a container is to increase the number of molecules per unit volume N/V in the container. That is what you do when you add air to a tire. The pressure in the tire can also be raised by increasing the average translational kinetic energy of the air molecules in the tire. That can be accomplished by increasing the temperature of that air, which is why the pressure inside a tire increases as the tire warms up during long road trips. The continuous flexing of the tire as it moves along the road surface results in work done on the rubber as parts of the tire distort, causing an increase in internal energy of the rubber. The increased temperature of the rubber results in the transfer of energy by heat into the air inside the tire. This transfer increases the air's temperature, and this increase in temperature in turn produces an increase in pressure.

Molecular Interpretation of Temperature

Let's now consider another macroscopic variable, the temperature T of the gas. We can gain some insight into the meaning of temperature by first writing Equation 21.15 in the form

$$PV = \frac{2}{3}N(\frac{1}{2}m_0\overline{v^2}) \quad (21.16)$$

Let's now compare this expression with the equation of state for an ideal gas (Eq. 19.10):

$$PV = Nk_B T \quad (21.17)$$

Equating the right sides of Equations 21.16 and 21.17 and solving for T gives

$$T = \frac{2}{3k_B}(\frac{1}{2}m_0\overline{v^2}) \quad (21.18)$$

Relationship between temperature and molecular kinetic energy ►

This result tells us that temperature is a direct measure of average molecular kinetic energy. By rearranging Equation 21.18, we can relate the translational molecular kinetic energy to the temperature:

Average kinetic energy per molecule ►

$$\frac{1}{2}m_0\overline{v^2} = \frac{3}{2}k_B T \quad (21.19)$$

That is, the average translational kinetic energy per molecule is $\frac{3}{2}k_B T$. Because $\overline{v_x^2} = \frac{1}{3}\overline{v^2}$ (Eq. 21.13), it follows that

$$\frac{1}{2}m_0\overline{v_x^2} = \frac{1}{2}k_B T \quad (21.20)$$

In a similar manner, for the y and z directions,

$$\frac{1}{2}m_0\overline{v_y^2} = \frac{1}{2}k_B T \quad \text{and} \quad \frac{1}{2}m_0\overline{v_z^2} = \frac{1}{2}k_B T$$

Therefore, each translational degree of freedom contributes an equal amount of energy, $\frac{1}{2}k_B T$, to the gas. (In general, a "degree of freedom" refers to an independent means by which a molecule can possess energy.) A generalization of this result, known as the **theorem of equipartition of energy**, is as follows:

Theorem of equipartition of energy ►

Each degree of freedom contributes $\frac{1}{2}k_B T$ to the energy of a system, where possible degrees of freedom are those associated with translation, rotation, and vibration of molecules.

The total translational kinetic energy of N molecules of gas is simply N times the average energy per molecule, which is given by Equation 21.19:

Total translational kinetic energy of N molecules ►

$$K_{\text{tot trans}} = N(\frac{1}{2}m_0\overline{v^2}) = \frac{3}{2}Nk_B T = \frac{3}{2}nRT \quad (21.21)$$

where we have used $k_B = R/N_A$ for Boltzmann's constant and $n = N/N_A$ for the number of moles of gas. If the gas molecules possess only translational kinetic energy, Equation 21.21 represents the internal energy of the gas. This result implies that the internal energy of an ideal gas depends *only* on the temperature. We will follow up on this point in Section 21.2.

The square root of $\overline{v^2}$ is called the **root-mean-square (rms) speed** of the molecules. From Equation 21.19, we find that the rms speed is

Root-mean-square speed ►

$$v_{\text{rms}} = \sqrt{\overline{v^2}} = \sqrt{\frac{3k_B T}{m_0}} = \sqrt{\frac{3RT}{M}} \quad (21.22)$$

where M is the molar mass in kilograms per mole and is equal to $m_0 N_A$. This expression shows that, at a given temperature, lighter molecules move faster, on the average, than do heavier molecules. For example, at a given temperature, hydrogen molecules, whose molar mass is 2.02×10^{-3} kg/mol, have an average speed approximately four times that of oxygen molecules, whose molar mass is 32.0×10^{-3} kg/mol. Table 21.1 lists the rms speeds for various molecules at 20°C .

Table 21.1 Some Root-Mean-Square (rms) Speeds

Gas	Molar Mass (g/mol)	v_{rms} at 20°C (m/s)	Gas	Molar Mass (g/mol)	v_{rms} at 20°C (m/s)
H ₂	2.02	1902	NO	30.0	494
He	4.00	1352	O ₂	32.0	478
H ₂ O	18.0	637	CO ₂	44.0	408
Ne	20.2	602	SO ₂	64.1	338
N ₂ or CO	28.0	511			

- Quick Quiz 21.1** Two containers hold an ideal gas at the same temperature and pressure. Both containers hold the same type of gas, but container B has twice the volume of container A. (i) What is the average translational kinetic energy per molecule in container B? (a) twice that of container A (b) the same as that of container A (c) half that of container A (d) impossible to determine (ii) From the same choices, describe the internal energy of the gas in container B.

Pitfall Prevention 21.1**The Square Root of the Square?**

Taking the square root of $\overline{v^2}$ does not “undo” the square because we have taken an average *between* squaring and taking the square root. Although the square root of $(\overline{v})^2$ is $\overline{v} = v_{\text{avg}}$ because the squaring is done after the averaging, the square root of $\overline{v^2}$ is *not* v_{avg} , but rather v_{rms} .

Example 21.1 A Tank of Helium

A tank used for filling helium balloons has a volume of 0.300 m³ and contains 2.00 mol of helium gas at 20.0°C. Assume the helium behaves like an ideal gas.

- (A)** What is the total translational kinetic energy of the gas molecules?

SOLUTION

Conceptualize Imagine a microscopic model of a gas in which you can watch the molecules move about the container more rapidly as the temperature increases. Because the gas is monatomic, the total translational kinetic energy of the molecules is the internal energy of the gas.

Categorize We evaluate parameters with equations developed in the preceding discussion, so this example is a substitution problem.

Use Equation 21.21 with $n = 2.00$ mol and $T = 293$ K:

$$E_{\text{int}} = \frac{3}{2} nRT = \frac{3}{2} (2.00 \text{ mol})(8.31 \text{ J/mol} \cdot \text{K})(293 \text{ K})$$

$$= 7.30 \times 10^3 \text{ J}$$

- (B)** What is the average kinetic energy per molecule?

SOLUTION

Use Equation 21.19:

$$\frac{1}{2} m_0 \overline{v^2} = \frac{3}{2} k_B T = \frac{3}{2} (1.38 \times 10^{-23} \text{ J/K})(293 \text{ K})$$

$$= 6.07 \times 10^{-21} \text{ J}$$

WHAT IF? What if the temperature is raised from 20.0°C to 40.0°C? Because 40.0 is twice as large as 20.0, is the total translational energy of the molecules of the gas twice as large at the higher temperature?

Answer The expression for the total translational energy depends on the temperature, and the value for the temperature must be expressed in kelvins, not in degrees Celsius. Therefore, the ratio of 40.0 to 20.0 is *not* the appropriate ratio. Converting the Celsius temperatures to kelvins, 20.0°C is 293 K and 40.0°C is 313 K. Therefore, the total translational energy increases by a factor of only 313 K/293 K = 1.07.

21.2 Molar Specific Heat of an Ideal Gas

Consider an ideal gas undergoing several processes such that the change in temperature is $\Delta T = T_f - T_i$ for all processes. The temperature change can be achieved

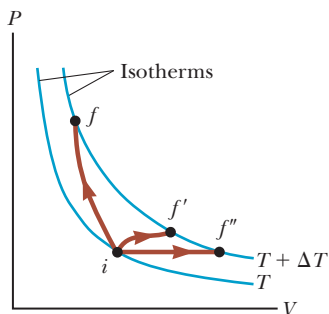


Figure 21.3 An ideal gas is taken from one isotherm at temperature T to another at temperature $T + \Delta T$ along three different paths.

by taking a variety of paths from one isotherm to another as shown in Figure 21.3. Because ΔT is the same for all paths, the change in internal energy ΔE_{int} is the same for all paths. The work W done on the gas (the negative of the area under the curves), however, is different for each path. Therefore, from the first law of thermodynamics, we can argue that the heat $Q = \Delta E_{\text{int}} - W$ associated with a given change in temperature does *not* have a unique value as discussed in Section 20.4.

We can address this difficulty by defining specific heats for two special processes that we have studied: isovolumetric and isobaric. Because the number of moles n is a convenient measure of the amount of gas, we define the **molar specific heats** associated with these processes as follows:

$$Q = nC_V \Delta T \quad (\text{constant volume}) \quad (21.23)$$

$$Q = nC_P \Delta T \quad (\text{constant pressure}) \quad (21.24)$$

where C_V is the **molar specific heat at constant volume** and C_P is the **molar specific heat at constant pressure**. When energy is added to a gas by heat at constant pressure, not only does the internal energy of the gas increase, but (negative) work is done on the gas because of the change in volume required to keep the pressure constant. Therefore, the heat Q in Equation 21.24 must account for both the increase in internal energy and the transfer of energy out of the system by work. For this reason, Q is greater in Equation 21.24 than in Equation 21.23 for given values of n and ΔT . Therefore, C_P is greater than C_V .

In the previous section, we found that the temperature of a gas is a measure of the average translational kinetic energy of the gas molecules. This kinetic energy is associated with the motion of the center of mass of each molecule. It does not include the energy associated with the internal motion of the molecule, namely, vibrations and rotations about the center of mass. That should not be surprising because the simple kinetic theory model assumes a structureless molecule.

So, let's first consider the simplest case of an ideal monatomic gas, that is, a gas containing one atom per molecule such as helium, neon, or argon. When energy is added to a monatomic gas in a container of fixed volume, all the added energy goes into increasing the translational kinetic energy of the atoms. There is no other way to store the energy in a monatomic gas. Therefore, from Equation 21.21, we see that the internal energy E_{int} of N molecules (or n mol) of an ideal monatomic gas is

$$E_{\text{int}} = K_{\text{tot trans}} = \frac{3}{2} N k_B T = \frac{3}{2} n R T \quad (21.25)$$

For a monatomic ideal gas, E_{int} is a function of T only and the functional relationship is given by Equation 21.25. In general, the internal energy of any ideal gas is a function of T only and the exact relationship depends on the type of gas.

If energy is transferred by heat to a system at constant volume, no work is done on the system. That is, $W = -\int P dV = 0$ for a constant-volume process. Hence, from the first law of thermodynamics,

$$Q = \Delta E_{\text{int}} \quad (21.26)$$

In other words, all the energy transferred by heat goes into increasing the internal energy of the system. A constant-volume process from i to f for an ideal gas is described in Figure 21.4, where ΔT is the temperature difference between the two isotherms. Substituting the expression for Q given by Equation 21.23 into Equation 21.26, we obtain

$$\Delta E_{\text{int}} = nC_V \Delta T \quad (21.27)$$

This equation applies to all ideal gases, those gases having more than one atom per molecule as well as monatomic ideal gases.

In the limit of infinitesimal changes, we can use Equation 21.27 to express the molar specific heat at constant volume as

$$C_V = \frac{1}{n} \frac{dE_{\text{int}}}{dT} \quad (21.28)$$

Internal energy of an ideal monatomic gas

Let's now apply the results of this discussion to a monatomic gas. Substituting the internal energy from Equation 21.25 into Equation 21.28 gives

$$C_V = \frac{3}{2}R = 12.5 \text{ J/mol} \cdot \text{K} \quad (21.29)$$

This expression predicts a value of $C_V = \frac{3}{2}R$ for *all* monatomic gases. This prediction is in excellent agreement with measured values of molar specific heats for such gases as helium, neon, argon, and xenon over a wide range of temperatures (Table 21.2). Small variations in Table 21.2 from the predicted values are because real gases are not ideal gases. In real gases, weak intermolecular interactions occur, which are not addressed in our ideal gas model.

Now suppose the gas is taken along the constant-pressure path $i \rightarrow f'$ shown in Figure 21.4. Along this path, the temperature again increases by ΔT . The energy that must be transferred by heat to the gas in this process is $Q = nC_p \Delta T$. Because the volume changes in this process, the work done on the gas is $W = -P \Delta V$, where P is the constant pressure at which the process occurs. Applying the first law of thermodynamics to this process, we have

$$\Delta E_{\text{int}} = Q + W = nC_p \Delta T + (-P \Delta V) \quad (21.30)$$

In this case, the energy added to the gas by heat is channeled as follows. Part of it leaves the system by work (that is, the gas moves a piston through a displacement), and the remainder appears as an increase in the internal energy of the gas. The change in internal energy for the process $i \rightarrow f'$, however, is equal to that for the process $i \rightarrow f$ because E_{int} depends only on temperature for an ideal gas and ΔT is the same for both processes. In addition, because $PV = nRT$, note that for a constant-pressure process, $P \Delta V = nR \Delta T$. Substituting this value for $P \Delta V$ into Equation 21.30 with $\Delta E_{\text{int}} = nC_V \Delta T$ (Eq. 21.27) gives

$$\begin{aligned} nC_V \Delta T &= nC_p \Delta T - nR \Delta T \\ C_p - C_V &= R \end{aligned} \quad (21.31)$$

This expression applies to *any* ideal gas. It predicts that the molar specific heat of an ideal gas at constant pressure is greater than the molar specific heat at constant volume by an amount R , the universal gas constant (which has the value $8.31 \text{ J/mol} \cdot \text{K}$). This expression is applicable to real gases as the data in Table 21.2 show.

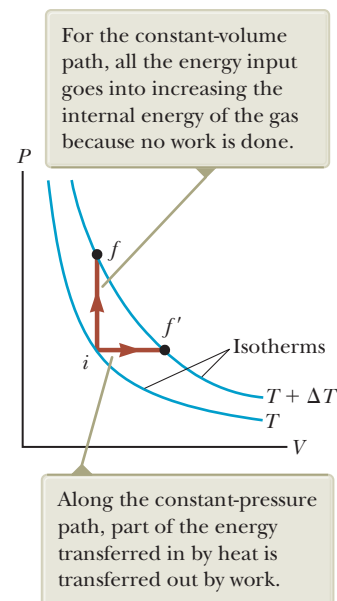


Figure 21.4 Energy is transferred by heat to an ideal gas in two ways.

Table 21.2 Molar Specific Heats of Various Gases

Gas	Molar Specific Heat ($\text{J/mol} \cdot \text{K}$) ^a			
	C_p	C_V	$C_p - C_V$	$\gamma = C_p/C_V$
<i>Monatomic gases</i>				
He	20.8	12.5	8.33	1.67
Ar	20.8	12.5	8.33	1.67
Ne	20.8	12.7	8.12	1.64
Kr	20.8	12.3	8.49	1.69
<i>Diatomic gases</i>				
H ₂	28.8	20.4	8.33	1.41
N ₂	29.1	20.8	8.33	1.40
O ₂	29.4	21.1	8.33	1.40
CO	29.3	21.0	8.33	1.40
Cl ₂	34.7	25.7	8.96	1.35
<i>Polyatomic gases</i>				
CO ₂	37.0	28.5	8.50	1.30
SO ₂	40.4	31.4	9.00	1.29
H ₂ O	35.4	27.0	8.37	1.30
CH ₄	35.5	27.1	8.41	1.31

^a All values except that for water were obtained at 300 K.

Because $C_V = \frac{3}{2}R$ for a monatomic ideal gas, Equation 21.31 predicts a value $C_P = \frac{5}{2}R = 20.8 \text{ J/mol} \cdot \text{K}$ for the molar specific heat of a monatomic gas at constant pressure. The ratio of these molar specific heats is a dimensionless quantity γ (Greek letter gamma):

Ratio of molar specific heats
for a monatomic ideal gas ▶

$$\gamma = \frac{C_P}{C_V} = \frac{5R/2}{3R/2} = \frac{5}{3} = 1.67 \quad (21.32)$$

Theoretical values of C_V , C_P , and γ are in excellent agreement with experimental values obtained for monatomic gases, but they are in serious disagreement with the values for the more complex gases (see Table 21.2). That is not surprising; the value $C_V = \frac{3}{2}R$ was derived for a monatomic ideal gas, and we expect some additional contribution to the molar specific heat from the internal structure of the more complex molecules. In Section 21.3, we describe the effect of molecular structure on the molar specific heat of a gas. The internal energy—and hence the molar specific heat—of a complex gas must include contributions from the rotational and the vibrational motions of the molecule.

In the case of solids and liquids heated at constant pressure, very little work is done during such a process because the thermal expansion is small. Consequently, C_P and C_V are approximately equal for solids and liquids.

- Quick Quiz 21.2** (i) How does the internal energy of an ideal gas change as it follows path $i \rightarrow f$ in Figure 21.4? (a) E_{int} increases. (b) E_{int} decreases. (c) E_{int} stays the same. (d) There is not enough information to determine how E_{int} changes. (ii) From the same choices, how does the internal energy of an ideal gas change as it follows path $f \rightarrow f'$ along the isotherm labeled $T + \Delta T$ in Figure 21.4?

Example 21.2 Heating a Cylinder of Helium

A cylinder contains 3.00 mol of helium gas at a temperature of 300 K.

(A) If the gas is heated at constant volume, how much energy must be transferred by heat to the gas for its temperature to increase to 500 K?

SOLUTION

Conceptualize Run the process in your mind with the help of the piston–cylinder arrangement in Figure 19.12. Imagine that the piston is clamped in position to maintain the constant volume of the gas.

Categorize We evaluate parameters with equations developed in the preceding discussion, so this example is a substitution problem.

Use Equation 21.23 to find the energy transfer:

$$Q_1 = nC_V \Delta T$$

Substitute the given values:

$$\begin{aligned} Q_1 &= (3.00 \text{ mol})(12.5 \text{ J/mol} \cdot \text{K})(500 \text{ K} - 300 \text{ K}) \\ &= 7.50 \times 10^3 \text{ J} \end{aligned}$$

(B) How much energy must be transferred by heat to the gas at constant pressure to raise the temperature to 500 K?

SOLUTION

Use Equation 21.24 to find the energy transfer:

$$Q_2 = nC_P \Delta T$$

Substitute the given values:

$$\begin{aligned} Q_2 &= (3.00 \text{ mol})(20.8 \text{ J/mol} \cdot \text{K})(500 \text{ K} - 300 \text{ K}) \\ &= 12.5 \times 10^3 \text{ J} \end{aligned}$$

This value is larger than Q_1 because of the transfer of energy out of the gas by work to raise the piston in the constant pressure process.

21.3 The Equipartition of Energy

Predictions based on our model for molar specific heat agree quite well with the behavior of monatomic gases, but not with the behavior of complex gases (see Table 21.2). The value predicted by the model for the quantity $C_p - C_v = R$, however, is the same for all gases. This similarity is not surprising because this difference is the result of the work done on the gas, which is independent of its molecular structure.

To clarify the variations in C_v and C_p in gases more complex than monatomic gases, let's explore further the origin of molar specific heat. So far, we have assumed the sole contribution to the internal energy of a gas is the translational kinetic energy of the molecules. The internal energy of a gas, however, includes contributions from the translational, vibrational, and rotational motion of the molecules. The rotational and vibrational motions of molecules can be activated by collisions and therefore are "coupled" to the translational motion of the molecules. The branch of physics known as *statistical mechanics* has shown that, for a large number of particles obeying the laws of Newtonian mechanics, the available energy is, on average, shared equally by each independent degree of freedom. Recall from Section 21.1 that the equipartition theorem states that, at equilibrium, each degree of freedom contributes $\frac{1}{2}k_B T$ of energy per molecule.

Let's consider a diatomic gas whose molecules have the shape of a dumbbell (Fig. 21.5). In this model, the center of mass of the molecule can translate in the x , y , and z directions (Fig. 21.5a). In addition, the molecule can rotate about three mutually perpendicular axes (Fig. 21.5b). The rotation about the y axis can be neglected because the molecule's moment of inertia I_y and its rotational energy $\frac{1}{2}I_y\omega^2$ about this axis are negligible compared with those associated with the x and z axes. (If the two atoms are modeled as particles, then I_y is identically zero.) Therefore, there are five degrees of freedom for translation and rotation: three associated with the translational motion and two associated with the rotational motion. Because each degree of freedom contributes, on average, $\frac{1}{2}k_B T$ of energy per molecule, the internal energy for a system of N molecules, ignoring vibration for now, is

$$E_{\text{int}} = 3N(\frac{1}{2}k_B T) + 2N(\frac{1}{2}k_B T) = \frac{5}{2}Nk_B T = \frac{5}{2}nRT$$

We can use this result and Equation 21.28 to find the molar specific heat at constant volume:

$$C_v = \frac{1}{n} \frac{dE_{\text{int}}}{dT} = \frac{1}{n} \frac{d}{dT}(\frac{5}{2}nRT) = \frac{5}{2}R = 20.8 \text{ J/mol} \cdot \text{K} \quad (21.33)$$

From Equations 21.31 and 21.32, we find that

$$C_p = C_v + R = \frac{7}{2}R = 29.1 \text{ J/mol} \cdot \text{K}$$

$$\gamma = \frac{C_p}{C_v} = \frac{\frac{7}{2}R}{\frac{5}{2}R} = \frac{7}{5} = 1.40$$

These results agree quite well with most of the data for diatomic molecules given in Table 21.2. That is rather surprising because we have not yet accounted for the possible vibrations of the molecule.

In the model for vibration, the two atoms are joined by an imaginary spring (see Fig. 21.5c). The vibrational motion adds two more degrees of freedom, which correspond to the kinetic energy and the potential energy associated with vibrations along the length of the molecule. Hence, a model that includes all three types of motion predicts a total internal energy of

$$E_{\text{int}} = 3N(\frac{1}{2}k_B T) + 2N(\frac{1}{2}k_B T) + 2N(\frac{1}{2}k_B T) = \frac{7}{2}Nk_B T = \frac{7}{2}nRT$$

and a molar specific heat at constant volume of

$$C_v = \frac{1}{n} \frac{dE_{\text{int}}}{dT} = \frac{1}{n} \frac{d}{dT}(\frac{7}{2}nRT) = \frac{7}{2}R = 29.1 \text{ J/mol} \cdot \text{K} \quad (21.34)$$

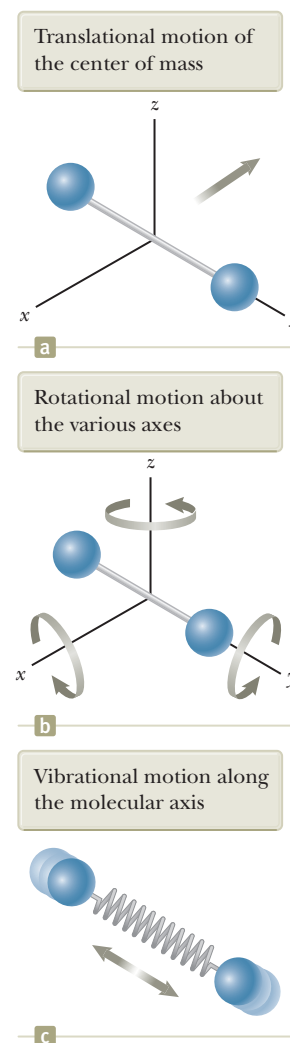
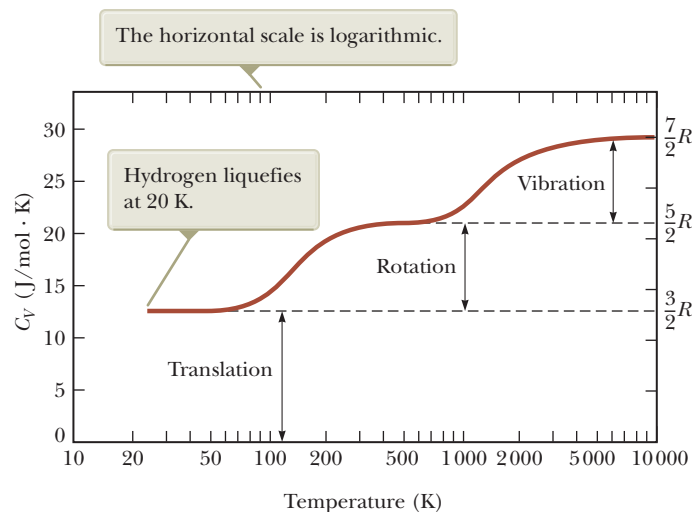


Figure 21.5 Possible motions of a diatomic molecule.

Figure 21.6 The molar specific heat of hydrogen as a function of temperature.



This value is inconsistent with experimental data for molecules such as H_2 and N_2 (see Table 21.2) and suggests a breakdown of our model based on classical physics.

It might seem that our model is a failure for predicting molar specific heats for diatomic gases. We can claim some success for our model, however, if measurements of molar specific heat are made over a wide temperature range rather than at the single temperature that gives us the values in Table 21.2. Figure 21.6 shows the molar specific heat of hydrogen as a function of temperature. The remarkable feature about the three plateaus in the graph's curve is that they are at the values of the molar specific heat predicted by Equations 21.29, 21.33, and 21.34! For low temperatures, the diatomic hydrogen gas behaves like a monatomic gas. As the temperature rises to room temperature, its molar specific heat rises to a value for a diatomic gas, consistent with the inclusion of rotation but not vibration. For high temperatures, the molar specific heat is consistent with a model including all types of motion.

Before addressing the reason for this mysterious behavior, let's make some brief remarks about polyatomic gases. For molecules with more than two atoms, three axes of rotation are available. The vibrations are more complex than for diatomic molecules. Therefore, the number of degrees of freedom is even larger. The result is an even higher predicted molar specific heat, which is in qualitative agreement with experiment. The molar specific heats for the polyatomic gases in Table 21.2 are higher than those for diatomic gases. The more degrees of freedom available to a molecule, the more "ways" there are to store energy, resulting in a higher molar specific heat.

A Hint of Energy Quantization

Our model for molar specific heats has been based so far on purely classical notions. It predicts a value of the specific heat for a diatomic gas that, according to Figure 21.6, only agrees with experimental measurements made at high temperatures. To explain why this value is only true at high temperatures and why the plateaus in Figure 21.6 exist, we must go beyond classical physics and introduce some quantum physics into the model. In Chapter 18, we discussed quantization of frequency for vibrating strings and air columns; only certain frequencies of standing waves can exist. That is a natural result whenever waves are subject to boundary conditions.

Quantum physics (Chapters 40 through 43) shows that atoms and molecules can be described by the waves under boundary conditions analysis model. Consequently, these waves have quantized frequencies. Furthermore, in quantum physics, the energy of a system is proportional to the frequency of the wave representing the system. Hence, **the energies of atoms and molecules are quantized.**

For a molecule, quantum physics tells us that the rotational and vibrational energies are quantized. Figure 21.7 shows an **energy-level diagram** for the rotational

and vibrational quantum states of a diatomic molecule. The lowest allowed state is called the **ground state**. The black lines show the energies allowed for the molecule. Notice that allowed vibrational states are separated by larger energy gaps than are rotational states.

At low temperatures, the energy a molecule gains in collisions with its neighbors is generally not large enough to raise it to the first excited state of either rotation or vibration. Therefore, even though rotation and vibration are allowed according to classical physics, they do not occur in reality at low temperatures. All molecules are in the ground state for rotation and vibration. The only contribution to the molecules' average energy is from translation, and the specific heat is that predicted by Equation 21.29.

As the temperature is raised, the average energy of the molecules increases. In some collisions, a molecule may have enough energy transferred to it from another molecule to excite the first rotational state. As the temperature is raised further, more molecules can be excited to this state. The result is that rotation begins to contribute to the internal energy, and the molar specific heat rises. At about room temperature in Figure 21.6, the second plateau has been reached and rotation contributes fully to the molar specific heat. The molar specific heat is now equal to the value predicted by Equation 21.33.

There is no contribution at room temperature from vibration because the molecules are still in the ground vibrational state. The temperature must be raised even further to excite the first vibrational state, which happens in Figure 21.6 between 1 000 K and 10 000 K. At 10 000 K on the right side of the figure, vibration is contributing fully to the internal energy and the molar specific heat has the value predicted by Equation 21.34.

The predictions of this model are supportive of the theorem of equipartition of energy. In addition, the inclusion in the model of energy quantization from quantum physics allows a full understanding of Figure 21.6.

Quick Quiz 21.3 The molar specific heat of a diatomic gas is measured at constant volume and found to be $29.1 \text{ J/mol} \cdot \text{K}$. What are the types of energy that are contributing to the molar specific heat? (a) translation only (b) translation and rotation only (c) translation and vibration only (d) translation, rotation, and vibration

Quick Quiz 21.4 The molar specific heat of a gas is measured at constant volume and found to be $11R/2$. Is the gas most likely to be (a) monatomic, (b) diatomic, or (c) polyatomic?

21.4 Adiabatic Processes for an Ideal Gas

As noted in Section 20.6, an **adiabatic process** is one in which no energy is transferred by heat between a system and its surroundings. For example, if a gas is compressed (or expanded) rapidly, very little energy is transferred out of (or into) the system by heat, so the process is nearly adiabatic. Such processes occur in the cycle of a gasoline engine, which is discussed in detail in Chapter 22. Another example of an adiabatic process is the slow expansion of a gas that is thermally insulated from its surroundings. All three variables in the ideal gas law— P , V , and T —change during an adiabatic process.

Let's imagine an adiabatic gas process involving an infinitesimal change in volume dV and an accompanying infinitesimal change in temperature dT . The work done on the gas is $-P dV$. Because the internal energy of an ideal gas depends only on temperature, the change in the internal energy in an adiabatic process is the same as that for an isovolumetric process between the same temperatures, $dE_{\text{int}} = nC_V dT$ (Eq. 21.27). Hence, the first law of thermodynamics, $\Delta E_{\text{int}} = Q + W$, with $Q = 0$, becomes the infinitesimal form

$$dE_{\text{int}} = nC_V dT = -P dV \quad (21.35)$$

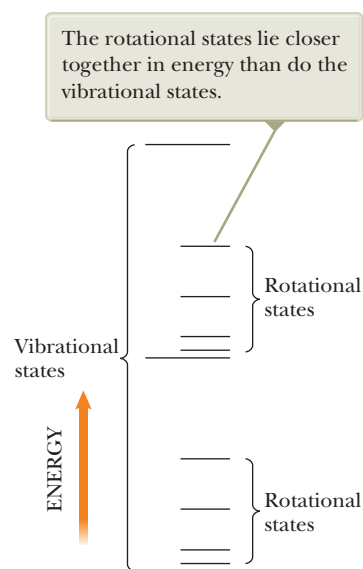


Figure 21.7 An energy-level diagram for vibrational and rotational states of a diatomic molecule.

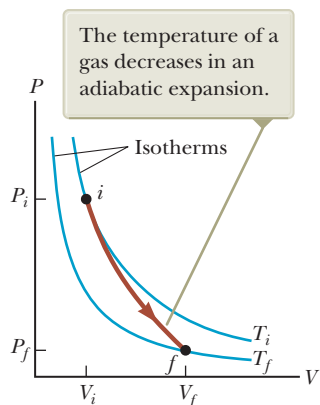


Figure 21.8 The PV diagram for an adiabatic expansion of an ideal gas.

Relationship between P and V ►
for an adiabatic process
involving an ideal gas

Relationship between T and V ►
for an adiabatic process
involving an ideal gas

Taking the total differential of the equation of state of an ideal gas, $PV = nRT$, gives

$$P dV + V dP = nR dT \quad (21.36)$$

Eliminating dT from Equations 21.35 and 21.36, we find that

$$P dV + V dP = -\frac{R}{C_V} P dV$$

Substituting $R = C_p - C_V$ and dividing by PV gives

$$\frac{dV}{V} + \frac{dP}{P} = -\left(\frac{C_p - C_V}{C_V}\right) \frac{dV}{V} = (1 - \gamma) \frac{dV}{V}$$

$$\frac{dP}{P} + \gamma \frac{dV}{V} = 0$$

Integrating this expression, we have

$$\ln P + \gamma \ln V = \text{constant}$$

which is equivalent to

$$PV^\gamma = \text{constant} \quad (21.37)$$

The PV diagram for an adiabatic expansion is shown in Figure 21.8. Because $\gamma > 1$, the PV curve is steeper than it would be for an isothermal expansion, for which $PV = \text{constant}$. By the definition of an adiabatic process, no energy is transferred by heat into or out of the system. Hence, from the first law, we see that ΔE_{int} is negative (work is done *by* the gas, so its internal energy decreases) and so ΔT also is negative. Therefore, the temperature of the gas decreases ($T_f < T_i$) during an adiabatic expansion.² Conversely, the temperature increases if the gas is compressed adiabatically. Applying Equation 21.37 to the initial and final states, we see that

$$P_i V_i^\gamma = P_f V_f^\gamma \quad (21.38)$$

Using the ideal gas law, we can express Equation 21.37 as

$$TV^{\gamma-1} = \text{constant} \quad (21.39)$$

Example 21.3 A Diesel Engine Cylinder

Air at 20.0°C in the cylinder of a diesel engine is compressed from an initial pressure of 1.00 atm and volume of 800.0 cm^3 to a volume of 60.0 cm^3 . Assume air behaves as an ideal gas with $\gamma = 1.40$ and the compression is adiabatic. Find the final pressure and temperature of the air.

SOLUTION

Conceptualize Imagine what happens if a gas is compressed into a smaller volume. Our discussion above and Figure 21.8 tell us that the pressure and temperature both increase.

Categorize We categorize this example as a problem involving an adiabatic process.

Analyze Use Equation 21.38 to find the final pressure:

$$P_f = P_i \left(\frac{V_i}{V_f}\right)^\gamma = (1.00 \text{ atm}) \left(\frac{800.0 \text{ cm}^3}{60.0 \text{ cm}^3}\right)^{1.40}$$

$$= 37.6 \text{ atm}$$

²In the adiabatic free expansion discussed in Section 20.6, the temperature remains constant. In this unique process, no work is done because the gas expands into a vacuum. In general, the temperature decreases in an adiabatic expansion in which work is done.

21.3 continued

Use the ideal gas law to find the final temperature:

$$\begin{aligned}\frac{P_i V_i}{T_i} &= \frac{P_f V_f}{T_f} \\ T_f &= \frac{P_f V_f}{P_i V_i} T_i = \frac{(37.6 \text{ atm})(60.0 \text{ cm}^3)}{(1.00 \text{ atm})(800.0 \text{ cm}^3)} (293 \text{ K}) \\ &= 826 \text{ K} = 553^\circ\text{C}\end{aligned}$$

Finalize The temperature of the gas increases by a factor of $826 \text{ K}/293 \text{ K} = 2.82$. The high compression in a diesel engine raises the temperature of the gas enough to cause the combustion of fuel without the use of spark plugs.

21.5 Distribution of Molecular Speeds

Thus far, we have considered only average values of the energies of all the molecules in a gas and have not addressed the distribution of energies among individual molecules. The motion of the molecules is extremely chaotic. Any individual molecule collides with others at an enormous rate, typically a billion times per second. Each collision results in a change in the speed and direction of motion of each of the participant molecules. Equation 21.22 shows that rms molecular speeds increase with increasing temperature. At a given time, what is the relative number of molecules that possess some characteristic such as energy within a certain range?

We shall address this question by considering the **number density** $n_V(E)$. This quantity, called a *distribution function*, is defined so that $n_V(E) dE$ is the number of molecules per unit volume with energy between E and $E + dE$. (The ratio of the number of molecules that have the desired characteristic to the total number of molecules is the probability that a particular molecule has that characteristic.) In general, the number density is found from statistical mechanics to be

$$n_V(E) = n_0 e^{-E/k_B T} \quad (21.40)$$

where n_0 is defined such that $n_0 dE$ is the number of molecules per unit volume having energy between $E = 0$ and $E = dE$. This equation, known as the **Boltzmann distribution law**, is important in describing the statistical mechanics of a large number of molecules. It states that the probability of finding the molecules in a particular energy state varies exponentially as the negative of the energy divided by $k_B T$. All the molecules would fall into the lowest energy level if the thermal agitation at a temperature T did not excite the molecules to higher energy levels.

Pitfall Prevention 21.2

The Distribution Function

The distribution function $n_V(E)$ is defined in terms of the number of molecules with energy in the range E to $E + dE$ rather than in terms of the number of molecules with energy E . Because the number of molecules is finite and the number of possible values of the energy is infinite, the number of molecules with an *exact* energy E may be zero.

◀ Boltzmann distribution law

Example 21.4 Thermal Excitation of Atomic Energy Levels

As discussed in Section 21.4, atoms can occupy only certain discrete energy levels. Consider a gas at a temperature of 2 500 K whose atoms can occupy only two energy levels separated by 1.50 eV, where 1 eV (electron volt) is an energy unit equal to $1.60 \times 10^{-19} \text{ J}$ (Fig. 21.9). Determine the ratio of the number of atoms in the higher energy level to the number in the lower energy level.

SOLUTION

Conceptualize In your mental representation of this example, remember that only two possible states are allowed for the system of the atom. Figure 21.9 helps you visualize the two states on an energy-level diagram. In this case, the atom has two possible energies, E_1 and E_2 , where $E_1 < E_2$.

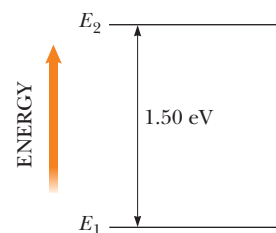


Figure 21.9 (Example 21.4) Energy-level diagram for a gas whose atoms can occupy two energy states.

continued

21.4 continued

Categorize We categorize this example as one in which we focus on particles in a two-state quantized system. We will apply the Boltzmann distribution law to this system.

Analyze Set up the ratio of the number of atoms in the higher energy level to the number in the lower energy level and use Equation 21.40 to express each number:

$$(1) \quad \frac{n_V(E_2)}{n_V(E_1)} = \frac{n_0 e^{-E_2/k_B T}}{n_0 e^{-E_1/k_B T}} = e^{-(E_2 - E_1)/k_B T}$$

Evaluate $k_B T$ in the exponent:

$$k_B T = (1.38 \times 10^{-23} \text{ J/K})(2\,500 \text{ K}) \left(\frac{1 \text{ eV}}{1.60 \times 10^{-19} \text{ J}} \right) = 0.216 \text{ eV}$$

Substitute this value into Equation (1):

$$\frac{n_V(E_2)}{n_V(E_1)} = e^{-1.50 \text{ eV}/0.216 \text{ eV}} = e^{-6.96} = 9.52 \times 10^{-4}$$

Finalize This result indicates that at $T = 2\,500 \text{ K}$, only a small fraction of the atoms are in the higher energy level. In fact, for every atom in the higher energy level, there are about 1 000 atoms in the lower level. The number of atoms in the higher level increases at even higher temperatures, but the distribution law specifies that at equilibrium there are always more atoms in the lower level than in the higher level.

WHAT IF? What if the energy levels in Figure 21.9 were closer together in energy? Would that increase or decrease the fraction of the atoms in the upper energy level?

Answer If the excited level is lower in energy than that in Figure 21.9, it would be easier for thermal agitation to excite atoms to this level and the fraction of atoms in this energy level would be larger, which we can see mathematically by expressing Equation (1) as

$$r_2 = e^{-(E_2 - E_1)/k_B T}$$

where r_2 is the ratio of atoms having energy E_2 to those with energy E_1 . Differentiating with respect to E_2 , we find

$$\frac{dr_2}{dE_2} = \frac{d}{dE_2} [e^{-(E_2 - E_1)/k_B T}] = -\frac{1}{k_B T} e^{-(E_2 - E_1)/k_B T} < 0$$

Because the derivative has a negative value, as E_2 decreases, r_2 increases.



© INTERFOTO/Alamy

Ludwig Boltzmann

Austrian physicist (1844–1906)

Boltzmann made many important contributions to the development of the kinetic theory of gases, electromagnetism, and thermodynamics. His pioneering work in the field of kinetic theory led to the branch of physics known as statistical mechanics.

Now that we have discussed the distribution of energies among molecules in a gas, let's think about the distribution of molecular speeds. In 1860, James Clerk Maxwell (1831–1879) derived an expression that describes the distribution of molecular speeds in a very definite manner. His work and subsequent developments by other scientists were highly controversial because direct detection of molecules could not be achieved experimentally at that time. About 60 years later, however, experiments were devised that confirmed Maxwell's predictions.

Let's consider a container of gas whose molecules have some distribution of speeds. Suppose we want to determine how many gas molecules have a speed in the range from, for example, 400 to 401 m/s. Intuitively, we expect the speed distribution to depend on temperature. Furthermore, we expect the distribution to peak in the vicinity of v_{rms} . That is, few molecules are expected to have speeds much less than or much greater than v_{rms} because these extreme speeds result only from an unlikely chain of collisions.

The observed speed distribution of gas molecules in thermal equilibrium is shown in Figure 21.10. The quantity N_v , called the **Maxwell–Boltzmann speed distribution function**, is defined as follows. If N is the total number of molecules, the number of molecules with speeds between v and $v + dv$ is $dN = N_v dv$. This number is also equal to the area of the shaded rectangle in Figure 21.10. Furthermore, the fraction of molecules with speeds between v and $v + dv$ is $(N_v dv)/N$. This fraction is also equal to the probability that a molecule has a speed in the range v to $v + dv$.

The fundamental expression that describes the distribution of speeds of N gas molecules is

$$N_v = 4\pi N \left(\frac{m_0}{2\pi k_B T} \right)^{3/2} v^2 e^{-m_0 v^2 / 2k_B T} \quad (21.41)$$

where m_0 is the mass of a gas molecule, k_B is Boltzmann's constant, and T is the absolute temperature.³ Observe the appearance of the Boltzmann factor $e^{-E/k_B T}$ with $E = \frac{1}{2}m_0 v^2$.

As indicated in Figure 21.10, the average speed is somewhat lower than the rms speed. The *most probable speed* v_{mp} is the speed at which the distribution curve reaches a peak. Using Equation 21.41, we find that

$$v_{rms} = \sqrt{\overline{v^2}} = \sqrt{\frac{3k_B T}{m_0}} = 1.73 \sqrt{\frac{k_B T}{m_0}} \quad (21.42)$$

$$v_{avg} = \sqrt{\frac{8k_B T}{\pi m_0}} = 1.60 \sqrt{\frac{k_B T}{m_0}} \quad (21.43)$$

$$v_{mp} = \sqrt{\frac{2k_B T}{m_0}} = 1.41 \sqrt{\frac{k_B T}{m_0}} \quad (21.44)$$

Equation 21.42 has previously appeared as Equation 21.22. The details of the derivations of these equations from Equation 21.41 are left for the end-of-chapter problems (see Problems 42 and 69). From these equations, we see that

$$v_{rms} > v_{avg} > v_{mp}$$

Figure 21.11 represents speed distribution curves for nitrogen, N_2 . The curves were obtained by using Equation 21.41 to evaluate the distribution function at various speeds and at two temperatures. Notice that the peak in each curve shifts to the right as T increases, indicating that the average speed increases with increasing temperature, as expected. Because the lowest speed possible is zero and the upper classical limit of the speed is infinity, the curves are asymmetrical. (In Chapter 39, we show that the actual upper limit is the speed of light.)

Equation 21.41 shows that the distribution of molecular speeds in a gas depends both on mass and on temperature. At a given temperature, the fraction of molecules with speeds exceeding a fixed value increases as the mass decreases. Hence,

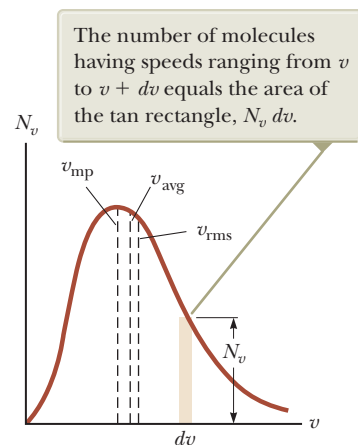


Figure 21.10 The speed distribution of gas molecules at some temperature. The function N_v approaches zero as v approaches infinity.

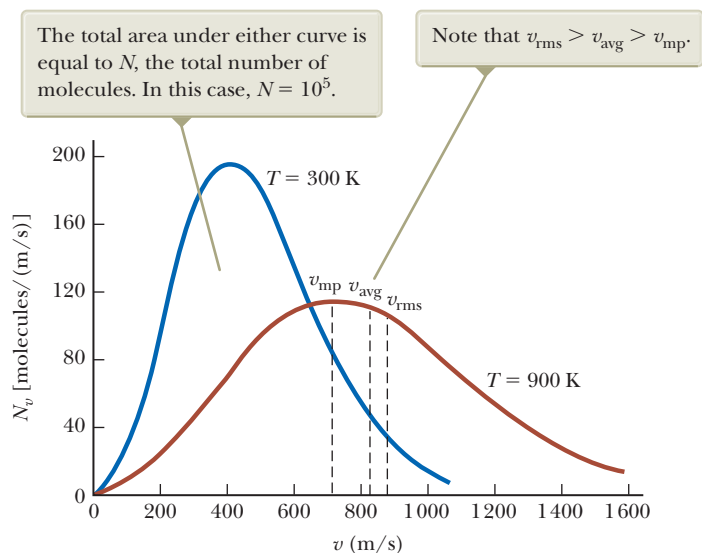


Figure 21.11 The speed distribution function for 10^5 nitrogen molecules at 300 K and 900 K.

³ For the derivation of this expression, see an advanced textbook on thermodynamics.

lighter molecules such as H_2 and He escape into space more readily from the Earth's atmosphere than do heavier molecules such as N_2 and O_2 . (See the discussion of escape speed in Chapter 13. Gas molecules escape even more readily from the Moon's surface than from the Earth's because the escape speed on the Moon is lower than that on the Earth.)

The speed distribution curves for molecules in a liquid are similar to those shown in Figure 21.11. We can understand the phenomenon of evaporation of a liquid from this distribution in speeds, given that some molecules in the liquid are more energetic than others. Some of the faster-moving molecules in the liquid penetrate the surface and even leave the liquid at temperatures well below the boiling point. The molecules that escape the liquid by evaporation are those that have sufficient energy to overcome the attractive forces of the molecules in the liquid phase. Consequently, the molecules left behind in the liquid phase have a lower average kinetic energy; as a result, the temperature of the liquid decreases. Hence, evaporation is a cooling process. For example, an alcohol-soaked cloth can be placed on a feverish head to cool and comfort a patient.

Example 21.5 A System of Nine Particles

Nine particles have speeds of 5.00, 8.00, 12.0, 12.0, 12.0, 14.0, 14.0, 17.0, and 20.0 m/s.

(A) Find the particles' average speed.

SOLUTION

Conceptualize Imagine a small number of particles moving in random directions with the few speeds listed. This situation is not representative of the large number of molecules in a gas, so we should not expect the results to be consistent with those from statistical mechanics.

Categorize Because we are dealing with a small number of particles, we can calculate the average speed directly.

Analyze Find the average speed of the particles by dividing the sum of the speeds by the total number of particles:

$$v_{\text{avg}} = \frac{(5.00 + 8.00 + 12.0 + 12.0 + 12.0 + 14.0 + 14.0 + 17.0 + 20.0) \text{ m/s}}{9} = 12.7 \text{ m/s}$$

(B) What is the rms speed of the particles?

SOLUTION

Find the average speed squared of the particles by dividing the sum of the speeds squared by the total number of particles:

$$\overline{v^2} = \frac{(5.00^2 + 8.00^2 + 12.0^2 + 12.0^2 + 12.0^2 + 14.0^2 + 14.0^2 + 17.0^2 + 20.0^2) \text{ m}^2/\text{s}^2}{9} = 178 \text{ m}^2/\text{s}^2$$

Find the rms speed of the particles by taking the square root:

$$v_{\text{rms}} = \sqrt{\overline{v^2}} = \sqrt{178 \text{ m}^2/\text{s}^2} = 13.3 \text{ m/s}$$

(C) What is the most probable speed of the particles?

SOLUTION

Three of the particles have a speed of 12.0 m/s, two have a speed of 14.0 m/s, and the remaining four have different speeds. Hence, the most probable speed v_{mp} is 12.0 m/s.

Finalize Compare this example, in which the number of particles is small and we know the individual particle speeds, with the next example.

Example 21.6 Molecular Speeds in a Hydrogen Gas

A 0.500-mol sample of hydrogen gas is at 300 K.

(A) Find the average speed, the rms speed, and the most probable speed of the hydrogen molecules.

SOLUTION

Conceptualize Imagine a huge number of particles in a real gas, all moving in random directions with different speeds.

Categorize We cannot calculate the averages as was done in Example 21.5 because the individual speeds of the particles are not known. We are dealing with a very large number of particles, however, so we can use the Maxwell-Boltzmann speed distribution function.

Analyze Use Equation 21.43 to find the average speed:

$$\begin{aligned} v_{\text{avg}} &= 1.60 \sqrt{\frac{k_B T}{m_0}} = 1.60 \sqrt{\frac{(1.38 \times 10^{-23} \text{ J/K})(300 \text{ K})}{2(1.67 \times 10^{-27} \text{ kg})}} \\ &= 1.78 \times 10^3 \text{ m/s} \end{aligned}$$

Use Equation 21.42 to find the rms speed:

$$\begin{aligned} v_{\text{rms}} &= 1.73 \sqrt{\frac{k_B T}{m_0}} = 1.73 \sqrt{\frac{(1.38 \times 10^{-23} \text{ J/K})(300 \text{ K})}{2(1.67 \times 10^{-27} \text{ kg})}} \\ &= 1.93 \times 10^3 \text{ m/s} \end{aligned}$$

Use Equation 21.44 to find the most probable speed:

$$\begin{aligned} v_{\text{mp}} &= 1.41 \sqrt{\frac{k_B T}{m_0}} = 1.41 \sqrt{\frac{(1.38 \times 10^{-23} \text{ J/K})(300 \text{ K})}{2(1.67 \times 10^{-27} \text{ kg})}} \\ &= 1.57 \times 10^3 \text{ m/s} \end{aligned}$$

(B) Find the number of molecules with speeds between 400 m/s and 401 m/s.

SOLUTION

Use Equation 21.41 to evaluate the number of molecules in a narrow speed range between v and $v + dv$:

$$(1) \quad N_v dv = 4\pi N \left(\frac{m_0}{2\pi k_B T} \right)^{3/2} v^2 e^{-m_0 v^2 / 2k_B T} dv$$

Evaluate the constant in front of v^2 :

$$\begin{aligned} 4\pi N \left(\frac{m_0}{2\pi k_B T} \right)^{3/2} &= 4\pi n N_A \left(\frac{m_0}{2\pi k_B T} \right)^{3/2} \\ &= 4\pi (0.500 \text{ mol})(6.02 \times 10^{23} \text{ mol}^{-1}) \left[\frac{2(1.67 \times 10^{-27} \text{ kg})}{2\pi(1.38 \times 10^{-23} \text{ J/K})(300 \text{ K})} \right]^{3/2} \\ &= 1.74 \times 10^{14} \text{ s}^3/\text{m}^3 \end{aligned}$$

Evaluate the exponent of e that appears in Equation (1):

$$-\frac{m_0 v^2}{2k_B T} = -\frac{2(1.67 \times 10^{-27} \text{ kg})(400 \text{ m/s})^2}{2(1.38 \times 10^{-23} \text{ J/K})(300 \text{ K})} = -0.0645$$

Evaluate $N_v dv$ using these values in Equation (1):

$$\begin{aligned} N_v dv &= (1.74 \times 10^{14} \text{ s}^3/\text{m}^3)(400 \text{ m/s})^2 e^{-0.0645}(1 \text{ m/s}) \\ &= 2.61 \times 10^{19} \text{ molecules} \end{aligned}$$

Finalize In this evaluation, we could calculate the result without integration because $dv = 1 \text{ m/s}$ is much smaller than $v = 400 \text{ m/s}$. Had we sought the number of particles between, say, 400 m/s and 500 m/s, we would need to integrate Equation (1) between these speed limits.

Summary

Concepts and Principles

The pressure of N molecules of an ideal gas contained in a volume V is

$$P = \frac{2}{3} \left(\frac{N}{V} \right) \left(\frac{1}{2} m_0 \overline{v^2} \right) \quad (21.15)$$

The average translational kinetic energy per molecule of a gas, $\frac{1}{2} m_0 \overline{v^2}$, is related to the temperature T of the gas through the expression

$$\frac{1}{2} m_0 \overline{v^2} = \frac{3}{2} k_B T \quad (21.19)$$

where k_B is Boltzmann's constant. Each translational degree of freedom (x , y , or z) has $\frac{1}{2} k_B T$ of energy associated with it.

The molar specific heat of an ideal monatomic gas at constant volume is $C_V = \frac{3}{2} R$; the molar specific heat at constant pressure is $C_P = \frac{5}{2} R$. The ratio of specific heats is given by $\gamma = C_P / C_V = \frac{5}{3}$.

The **Boltzmann distribution law** describes the distribution of particles among available energy states. The relative number of particles having energy between E and $E + dE$ is $n_V(E) dE$, where

$$n_V(E) = n_0 e^{-E/k_B T} \quad (21.40)$$

The **Maxwell-Boltzmann speed distribution function** describes the distribution of speeds of molecules in a gas:

$$N_v = 4\pi N \left(\frac{m_0}{2\pi k_B T} \right)^{3/2} v^2 e^{-m_0 v^2 / 2k_B T} \quad (21.41)$$

The internal energy of N molecules (or n mol) of an ideal monatomic gas is

$$E_{\text{int}} = \frac{3}{2} N k_B T = \frac{3}{2} n R T \quad (21.25)$$

The change in internal energy for n mol of any ideal gas that undergoes a change in temperature ΔT is

$$\Delta E_{\text{int}} = n C_V \Delta T \quad (21.27)$$

where C_V is the **molar specific heat at constant volume**.

If an ideal gas undergoes an adiabatic expansion or compression, the first law of thermodynamics, together with the equation of state, shows that

$$P V^\gamma = \text{constant} \quad (21.37)$$

Equation 21.41 enables us to calculate the **root-mean-square speed**, the **average speed**, and the **most probable speed** of molecules in a gas:

$$v_{\text{rms}} = \sqrt{\overline{v^2}} = \sqrt{\frac{3k_B T}{m_0}} = 1.73 \sqrt{\frac{k_B T}{m_0}} \quad (21.42)$$

$$v_{\text{avg}} = \sqrt{\frac{8k_B T}{\pi m_0}} = 1.60 \sqrt{\frac{k_B T}{m_0}} \quad (21.43)$$

$$v_{\text{mp}} = \sqrt{\frac{2k_B T}{m_0}} = 1.41 \sqrt{\frac{k_B T}{m_0}} \quad (21.44)$$

Objective Questions

1. denotes answer available in *Student Solutions Manual/Study Guide*

- Cylinder A contains oxygen (O_2) gas, and cylinder B contains nitrogen (N_2) gas. If the molecules in the two cylinders have the same rms speeds, which of the following statements is *false*? (a) The two gases have different temperatures. (b) The temperature of cylinder B is less than the temperature of cylinder A. (c) The temperature of cylinder B is greater than the temperature of cylinder A. (d) The average kinetic energy of the nitrogen molecules is less than the average kinetic energy of the oxygen molecules.
- An ideal gas is maintained at constant pressure. If the temperature of the gas is increased from 200 K to 600 K, what happens to the rms speed of the molecules? (a) It increases by a factor of 3. (b) It remains the same. (c) It is one-third the original speed. (d) It is $\sqrt{3}$ times the original speed. (e) It increases by a factor of 6.
- Two samples of the same ideal gas have the same pressure and density. Sample B has twice the volume of sample A. What is the rms speed of the molecules in sample B? (a) twice that in sample A (b) equal to that in sample A (c) half that in sample A (d) impossible to determine
- A helium-filled latex balloon initially at room temperature is placed in a freezer. The latex remains flexible. (i) Does the balloon's volume (a) increase, (b) decrease, or (c) remain the same? (ii) Does the pressure of the helium gas (a) increase significantly, (b) decrease significantly, or (c) remain approximately the same?

- A gas is at 200 K. If we wish to double the rms speed of the molecules of the gas, to what value must we raise its temperature? (a) 283 K (b) 400 K (c) 566 K (d) 800 K (e) 1130 K
- Rank the following from largest to smallest, noting any cases of equality. (a) the average speed of molecules in a particular sample of ideal gas (b) the most probable speed (c) the root-mean-square speed (d) the average vector velocity of the molecules
- A sample of gas with a thermometer immersed in the gas is held over a hot plate. A student is asked to give a step-by-step account of what makes our observation of the temperature of the gas increase. His response includes the following steps. (a) The molecules speed up. (b) Then the molecules collide with one another more often. (c) Internal friction makes the collisions inelastic. (d) Heat is produced in the collisions. (e) The molecules of the gas transfer more energy to the thermometer when they strike it, so we observe that the temperature has gone up. (f) The same process can take place without the use of a hot plate if you quickly push in the piston in an insulated cylinder containing the gas. (i) Which of the parts (a) through (f) of this account are correct statements necessary for a clear and complete explanation? (ii) Which are correct statements that are not necessary to account for the higher thermometer reading? (iii) Which are incorrect statements?
- An ideal gas is contained in a vessel at 300 K. The temperature of the gas is then increased to 900 K. (i) By what factor does the average kinetic energy of the molecules change, (a) a factor of 9, (b) a factor of 3, (c) a factor of $\sqrt{3}$, (d) a factor of 1, or (e) a factor of $\frac{1}{3}$? Using the same choices as in part (i), by what factor does each of the following change: (ii) the rms molecular speed of the molecules, (iii) the average momentum change that one molecule undergoes in a collision with one particular wall, (iv) the rate of collisions of molecules with walls, and (v) the pressure of the gas.
- Which of the assumptions below is *not* made in the kinetic theory of gases? (a) The number of molecules is very large. (b) The molecules obey Newton's laws of motion. (c) The forces between molecules are long range. (d) The gas is a pure substance. (e) The average separation between molecules is large compared to their dimensions.

Conceptual Questions

1. denotes answer available in *Student Solutions Manual/Study Guide*

- Hot air rises, so why does it generally become cooler as you climb a mountain? *Note:* Air has low thermal conductivity.
- Why does a diatomic gas have a greater energy content per mole than a monatomic gas at the same temperature?
- When alcohol is rubbed on your body, it lowers your skin temperature. Explain this effect.
- What happens to a helium-filled latex balloon released into the air? Does it expand or contract? Does it stop rising at some height?
- Which is denser, dry air or air saturated with water vapor? Explain.
- One container is filled with helium gas and another with argon gas. Both containers are at the same temperature. Which molecules have the higher rms speed? Explain.
- Dalton's law of partial pressures states that the total pressure of a mixture of gases is equal to the sum of the pressures that each gas in the mixture would exert if it were alone in the container. Give a convincing argument for this law based on the kinetic theory of gases.

Problems

WebAssign The problems found in this chapter may be assigned online in Enhanced WebAssign

1. straightforward; 2. intermediate;
3. challenging

1. full solution available in the *Student Solutions Manual/Study Guide*

AMT Analysis Model tutorial available in Enhanced WebAssign

GP Guided Problem

M Master It tutorial available in Enhanced WebAssign

W Watch It video solution available in Enhanced WebAssign

Section 21.1 Molecular Model of an Ideal Gas

Problem 30 in Chapter 19 can be assigned with this section.

- (a) How many atoms of helium gas fill a spherical **M** balloon of diameter 30.0 cm at 20.0°C and 1.00 atm? (b) What is the average kinetic energy of the helium

atoms? (c) What is the rms speed of the helium atoms?

- M** A cylinder contains a mixture of helium and argon gas in equilibrium at 150°C. (a) What is the average kinetic energy for each type of gas molecule? (b) What is the rms speed of each type of molecule?

3. In a 30.0-s interval, 500 hailstones strike a glass window of area 0.600 m^2 at an angle of 45.0° to the window surface. Each hailstone has a mass of 5.00 g and a speed of 8.00 m/s. Assuming the collisions are elastic, find (a) the average force and (b) the average pressure on the window during this interval.
4. In an ultrahigh vacuum system (with typical pressures lower than 10^{-7} pascal), the pressure is measured to be 1.00×10^{-10} torr (where 1 torr = 133 Pa). Assuming the temperature is 300 K, find the number of molecules in a volume of 1.00 m^3 .
5. A spherical balloon of volume $4.00 \times 10^3 \text{ cm}^3$ contains helium at a pressure of $1.20 \times 10^5 \text{ Pa}$. How many moles of helium are in the balloon if the average kinetic energy of the helium atoms is $3.60 \times 10^{-22} \text{ J}$?
6. A spherical balloon of volume V contains helium at a pressure P . How many moles of helium are in the balloon if the average kinetic energy of the helium atoms is \bar{K} ?
7. A 2.00-mol sample of oxygen gas is confined to a 5.00-L vessel at a pressure of 8.00 atm. Find the average translational kinetic energy of the oxygen molecules under these conditions.
8. Oxygen, modeled as an ideal gas, is in a container and has a temperature of 77.0°C . What is the rms-average magnitude of the momentum of the gas molecules in the container?
9. Calculate the mass of an atom of (a) helium, (b) iron, and (c) lead. Give your answers in kilograms. The atomic masses of these atoms are 4.00 u, 55.9 u, and 207 u, respectively.
10. The rms speed of an oxygen molecule (O_2) in a container of oxygen gas is 625 m/s. What is the temperature of the gas?
11. A 5.00-L vessel contains nitrogen gas at 27.0°C and 3.00 atm. Find (a) the total translational kinetic energy of the gas molecules and (b) the average kinetic energy per molecule.
12. A 7.00-L vessel contains 3.50 moles of gas at a pressure of $1.60 \times 10^6 \text{ Pa}$. Find (a) the temperature of the gas and (b) the average kinetic energy of the gas molecules in the vessel. (c) What additional information would you need if you were asked to find the average speed of the gas molecules?
13. In a period of 1.00 s, 5.00×10^{23} nitrogen molecules strike a wall with an area of 8.00 cm^2 . Assume the molecules move with a speed of 300 m/s and strike the wall head-on in elastic collisions. What is the pressure exerted on the wall? *Note:* The mass of one N_2 molecule is $4.65 \times 10^{-26} \text{ kg}$.
14. In a constant-volume process, 209 J of energy is transferred by heat to 1.00 mol of an ideal monatomic gas initially at 300 K. Find (a) the work done on the gas, (b) the increase in internal energy of the gas, and (c) its final temperature.
15. A sample of a diatomic ideal gas has pressure P and volume V . When the gas is warmed, its pressure triples and its volume doubles. This warming process includes two steps, the first at constant pressure and the second at constant volume. Determine the amount of energy transferred to the gas by heat.
16. **Review.** A house has well-insulated walls. It contains a volume of 100 m^3 of air at 300 K. (a) Calculate the energy required to increase the temperature of this diatomic ideal gas by 1.00°C . (b) **What If?** If all this energy could be used to lift an object of mass m through a height of 2.00 m, what is the value of m ?
17. A 1.00-mol sample of hydrogen gas is heated at constant pressure from 300 K to 420 K. Calculate (a) the energy transferred to the gas by heat, (b) the increase in its internal energy, and (c) the work done on the gas.
18. A vertical cylinder with a heavy piston contains air at 300 K. The initial pressure is $2.00 \times 10^5 \text{ Pa}$, and the initial volume is 0.350 m^3 . Take the molar mass of air as 28.9 g/mol and assume $C_V = \frac{5}{2}R$. (a) Find the specific heat of air at constant volume in units of $\text{J}/\text{kg} \cdot ^\circ\text{C}$. (b) Calculate the mass of the air in the cylinder. (c) Suppose the piston is held fixed. Find the energy input required to raise the temperature of the air to 700 K. (d) **What If?** Assume again the conditions of the initial state and assume the heavy piston is free to move. Find the energy input required to raise the temperature to 700 K.
19. Calculate the change in internal energy of 3.00 mol of helium gas when its temperature is increased by 2.00 K.
20. A 1.00-L insulated bottle is full of tea at 90.0°C . You pour out one cup of tea and immediately screw the stopper back on the bottle. Make an order-of-magnitude estimate of the change in temperature of the tea remaining in the bottle that results from the admission of air at room temperature. State the quantities you take as data and the values you measure or estimate for them.
21. **Review.** This problem is a continuation of Problem 39 in Chapter 19. A hot-air balloon consists of an envelope of constant volume 400 m^3 . Not including the air inside, the balloon and cargo have mass 200 kg. The air outside and originally inside is a diatomic ideal gas at 10.0°C and 101 kPa, with density $1.25 \text{ kg}/\text{m}^3$. A propane burner at the center of the spherical envelope injects energy into the air inside. The air inside stays at constant pressure. Hot air, at just the temperature required to make the balloon lift off, starts to fill the envelope at its closed top, rapidly enough so that negligible energy flows by heat to the cool air below it or out through the wall of the balloon. Air at 10°C leaves through an opening at the bottom of the envelope until the whole balloon is filled with hot air at uniform temperature. Then the burner is shut off and

Section 21.2 Molar Specific Heat of an Ideal Gas

Note: You may use data in Table 21.2 about particular gases. Here we define a “monatomic ideal gas” to have molar specific heats $C_V = \frac{3}{2}R$ and $C_P = \frac{5}{2}R$, and a “diatomic ideal gas” to have $C_V = \frac{5}{2}R$ and $C_P = \frac{7}{2}R$.

the balloon rises from the ground. (a) Evaluate the quantity of energy the burner must transfer to the air in the balloon. (b) The “heat value” of propane—the internal energy released by burning each kilogram—is 50.3 MJ/kg. What mass of propane must be burned?

Section 21.3 The Equipartition of Energy

22. A certain molecule has f degrees of freedom. Show that an ideal gas consisting of such molecules has the following properties: (a) its total internal energy is $fnRT/2$, (b) its molar specific heat at constant volume is $fR/2$, (c) its molar specific heat at constant pressure is $(f + 2)R/2$, and (d) its specific heat ratio is $\gamma = C_p/C_v = (f + 2)/f$.
23. In a crude model (Fig. P21.23) of a rotating diatomic chlorine molecule (Cl_2), the two Cl atoms are 2.00×10^{-10} m apart and rotate about their center of mass with angular speed $\omega = 2.00 \times 10^{12}$ rad/s. What is the rotational kinetic energy of one molecule of Cl_2 , which has a molar mass of 70.0 g/mol?

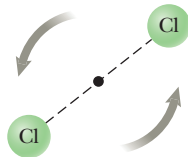


Figure P21.23

24. Why is the following situation impossible? A team of researchers discovers a new gas, which has a value of $\gamma = C_p/C_v$ of 1.75.
25. The relationship between the heat capacity of a sample and the specific heat of the sample material is discussed in Section 20.2. Consider a sample containing 2.00 mol of an ideal diatomic gas. Assuming the molecules rotate but do not vibrate, find (a) the total heat capacity of the sample at constant volume and (b) the total heat capacity at constant pressure. (c) **What If?** Repeat parts (a) and (b), assuming the molecules both rotate and vibrate.

Section 21.4 Adiabatic Processes for an Ideal Gas

26. A 2.00-mol sample of a diatomic ideal gas expands slowly and adiabatically from a pressure of 5.00 atm and a volume of 12.0 L to a final volume of 30.0 L. (a) What is the final pressure of the gas? (b) What are the initial and final temperatures? Find (c) Q , (d) ΔE_{int} , and (e) W for the gas during this process.
27. During the compression stroke of a certain gasoline engine, the pressure increases from 1.00 atm to 20.0 atm. If the process is adiabatic and the air–fuel mixture behaves as a diatomic ideal gas, (a) by what factor does the volume change and (b) by what factor does the temperature change? Assuming the compression starts with 0.016 0 mol of gas at 27.0°C, find the values of (c) Q , (d) ΔE_{int} , and (e) W that characterize the process.
28. How much work is required to compress 5.00 mol of air at 20.0°C and 1.00 atm to one-tenth of the original volume (a) by an isothermal process? (b) **What If?**

How much work is required to produce the same compression in an adiabatic process? (c) What is the final pressure in part (a)? (d) What is the final pressure in part (b)?

29. Air in a thundercloud expands as it rises. If its initial temperature is 300 K and no energy is lost by thermal conduction on expansion, what is its temperature when the initial volume has doubled?
30. Why is the following situation impossible? A new diesel engine that increases fuel economy over previous models is designed. Automobiles fitted with this design become incredible best sellers. Two design features are responsible for the increased fuel economy: (1) the engine is made entirely of aluminum to reduce the weight of the automobile, and (2) the exhaust of the engine is used to prewarm the air to 50°C before it enters the cylinder to increase the final temperature of the compressed gas. The engine has a *compression ratio*—that is, the ratio of the initial volume of the air to its final volume after compression—of 14.5. The compression process is adiabatic, and the air behaves as a diatomic ideal gas with $\gamma = 1.40$.
31. During the power stroke in a four-stroke automobile engine, the piston is forced down as the mixture of combustion products and air undergoes an adiabatic expansion. Assume (1) the engine is running at 2 500 cycles/min; (2) the gauge pressure immediately before the expansion is 20.0 atm; (3) the volumes of the mixture immediately before and after the expansion are 50.0 cm³ and 400 cm³, respectively (Fig. P21.31); (4) the time interval for the expansion is one-fourth that of the total cycle; and (5) the mixture behaves like an ideal gas with specific heat ratio 1.40. Find the average power generated during the power stroke.

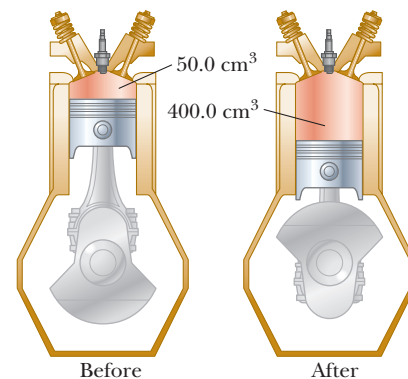


Figure P21.31

32. Air (a diatomic ideal gas) at 27.0°C and atmospheric pressure is drawn into a bicycle pump (see the chapter-opening photo on page 626) that has a cylinder with an inner diameter of 2.50 cm and length 50.0 cm. The downstroke adiabatically compresses the air, which reaches a gauge pressure of 8.00×10^5 Pa before entering the tire. We wish to investigate the temperature increase of the pump. (a) What is the initial volume of the air in the pump? (b) What is the number of moles of air in the pump? (c) What is the absolute

pressure of the compressed air? (d) What is the volume of the compressed air? (e) What is the temperature of the compressed air? (f) What is the increase in internal energy of the gas during the compression? **What If?** The pump is made of steel that is 2.00 mm thick. Assume 4.00 cm of the cylinder's length is allowed to come to thermal equilibrium with the air. (g) What is the volume of steel in this 4.00-cm length? (h) What is the mass of steel in this 4.00-cm length? (i) Assume the pump is compressed once. After the adiabatic expansion, conduction results in the energy increase in part (f) being shared between the gas and the 4.00-cm length of steel. What will be the increase in temperature of the steel after one compression?

33. A 4.00-L sample of a diatomic ideal gas with specific heat ratio 1.40, confined to a cylinder, is carried through a closed cycle. The gas is initially at 1.00 atm and 300 K. First, its pressure is tripled under constant volume. Then, it expands adiabatically to its original pressure. Finally, the gas is compressed isobarically to its original volume. (a) Draw a PV diagram of this cycle. (b) Determine the volume of the gas at the end of the adiabatic expansion. (c) Find the temperature of the gas at the start of the adiabatic expansion. (d) Find the temperature at the end of the cycle. (e) What was the net work done on the gas for this cycle?
34. An ideal gas with specific heat ratio γ confined to a cylinder is put through a closed cycle. Initially, the gas is at P_i , V_i , and T_i . First, its pressure is tripled under constant volume. It then expands adiabatically to its original pressure and finally is compressed isobarically to its original volume. (a) Draw a PV diagram of this cycle. (b) Determine the volume at the end of the adiabatic expansion. Find (c) the temperature of the gas at the start of the adiabatic expansion and (d) the temperature at the end of the cycle. (e) What was the net work done on the gas for this cycle?

Section 21.5 Distribution of Molecular Speeds

35. Helium gas is in thermal equilibrium with liquid helium at 4.20 K. Even though it is on the point of condensation, model the gas as ideal and determine the most probable speed of a helium atom (mass = 6.64×10^{-27} kg) in it.
36. Fifteen identical particles have various speeds: one has a speed of 2.00 m/s, two have speeds of 3.00 m/s, three have speeds of 5.00 m/s, four have speeds of 7.00 m/s, three have speeds of 9.00 m/s, and two have speeds of 12.0 m/s. Find (a) the average speed, (b) the rms speed, and (c) the most probable speed of these particles.
37. One cubic meter of atomic hydrogen at 0°C at atmospheric pressure contains approximately 2.70×10^{25} atoms. The first excited state of the hydrogen atom has an energy of 10.2 eV above that of the lowest state, called the ground state. Use the Boltzmann factor to find the number of atoms in the first excited state (a) at 0°C and at (b) $(1.00 \times 10^4)^\circ\text{C}$.
38. Two gases in a mixture diffuse through a filter at rates proportional to their rms speeds. (a) Find the ratio of

speeds for the two isotopes of chlorine, ^{35}Cl and ^{37}Cl , as they diffuse through the air. (b) Which isotope moves faster?

39. **Review.** At what temperature would the average speed of helium atoms equal (a) the escape speed from the Earth, 1.12×10^4 m/s, and (b) the escape speed from the Moon, 2.37×10^3 m/s? *Note:* The mass of a helium atom is 6.64×10^{-27} kg.
40. Consider a container of nitrogen gas molecules at 900 K. Calculate (a) the most probable speed, (b) the average speed, and (c) the rms speed for the molecules. (d) State how your results compare with the values displayed in Figure 21.11.
41. Assume the Earth's atmosphere has a uniform temperature of 20.0°C and uniform composition, with an effective molar mass of 28.9 g/mol. (a) Show that the number density of molecules depends on height y above sea level according to

$$n_V(y) = n_0 e^{-m_0 g y / k_B T}$$

where n_0 is the number density at sea level (where $y = 0$). This result is called the *law of atmospheres*. (b) Commercial jetliners typically cruise at an altitude of 11.0 km. Find the ratio of the atmospheric density there to the density at sea level.

42. From the Maxwell-Boltzmann speed distribution, show that the most probable speed of a gas molecule is given by Equation 21.44. *Note:* The most probable speed corresponds to the point at which the slope of the speed distribution curve dN_v/dv is zero.
43. The law of atmospheres states that the number density of molecules in the atmosphere depends on height y above sea level according to

$$n_V(y) = n_0 e^{-m_0 g y / k_B T}$$

where n_0 is the number density at sea level (where $y = 0$). The average height of a molecule in the Earth's atmosphere is given by

$$y_{\text{avg}} = \frac{\int_0^\infty y n_V(y) dy}{\int_0^\infty n_V(y) dy} = \frac{\int_0^\infty y e^{-m_0 g y / k_B T} dy}{\int_0^\infty e^{-m_0 g y / k_B T} dy}$$

- (a) Prove that this average height is equal to $k_B T / m_0 g$. (b) Evaluate the average height, assuming the temperature is 10.0°C and the molecular mass is 28.9 u, both uniform throughout the atmosphere.

Additional Problems

44. Eight molecules have speeds of 3.00 km/s, 4.00 km/s, 5.80 km/s, 2.50 km/s, 3.60 km/s, 1.90 km/s, 3.80 km/s, and 6.60 km/s. Find (a) the average speed of the molecules and (b) the rms speed of the molecules.
45. A small oxygen tank at a gauge pressure of 125 atm has a volume of 6.88 L at 21.0°C . (a) If an athlete breathes oxygen from this tank at the rate of 8.50 L/min when measured at atmospheric pressure and the temperature remains at 21.0°C , how long will the tank last before it is empty? (b) At a particular moment during

this process, what is the ratio of the rms speed of the molecules remaining in the tank to the rms speed of those being released at atmospheric pressure?

46. The dimensions of a classroom are $4.20 \text{ m} \times 3.00 \text{ m} \times 2.50 \text{ m}$. (a) Find the number of molecules of air in the classroom at atmospheric pressure and 20.0°C . (b) Find the mass of this air, assuming the air consists of diatomic molecules with molar mass 28.9 g/mol . (c) Find the average kinetic energy of the molecules. (d) Find the rms molecular speed. (e) **What If?** Assume the molar specific heat of the air is independent of temperature. Find the change in internal energy of the air in the room as the temperature is raised to 25.0°C . (f) Explain how you could convince a fellow student that your answer to part (e) is correct, even though it sounds surprising.
47. The Earth's atmosphere consists primarily of oxygen (21%) and nitrogen (78%). The rms speed of oxygen molecules (O_2) in the atmosphere at a certain location is 535 m/s . (a) What is the temperature of the atmosphere at this location? (b) Would the rms speed of nitrogen molecules (N_2) at this location be higher, equal to, or lower than 535 m/s ? Explain. (c) Determine the rms speed of N_2 at his location.
48. The *mean free path* ℓ of a molecule is the average distance that a molecule travels before colliding with another molecule. It is given by

$$\ell = \frac{1}{\sqrt{2}\pi d^2 N_V}$$

where d is the diameter of the molecule and N_V is the number of molecules per unit volume. The number of collisions that a molecule makes with other molecules per unit time, or *collision frequency* f , is given by

$$f = \frac{v_{\text{avg}}}{\ell}$$

- (a) If the diameter of an oxygen molecule is $2.00 \times 10^{-10} \text{ m}$, find the mean free path of the molecules in a scuba tank that has a volume of 12.0 L and is filled with oxygen at a gauge pressure of 100 atm at a temperature of 25.0°C . (b) What is the average time interval between molecular collisions for a molecule of this gas?
49. An air rifle shoots a lead pellet by allowing high-pressure air to expand, propelling the pellet down the rifle barrel. Because this process happens very quickly, no appreciable thermal conduction occurs and the expansion is essentially adiabatic. Suppose the rifle starts with 12.0 cm^3 of compressed air, which behaves as an ideal gas with $\gamma = 1.40$. The expanding air pushes a 1.10-g pellet as a piston with cross-sectional area 0.0300 cm^2 along the 50.0-cm -long gun barrel. What initial pressure is required to eject the pellet with a muzzle speed of 120 m/s ? Ignore the effects of the air in front of the bullet and friction with the inside walls of the barrel.
50. In a sample of a solid metal, each atom is free to vibrate about some equilibrium position. The atom's energy consists of kinetic energy for motion in the x , y , and z directions plus elastic potential energy associated with the Hooke's law forces exerted by neighboring atoms on it in the x , y , and z directions. According to the theorem of equipartition of energy, assume the average energy of each atom is $\frac{1}{2}k_B T$ for each degree of freedom. (a) Prove that the molar specific heat of the solid is $3R$. The *Dulong–Petit law* states that this result generally describes pure solids at sufficiently high temperatures. (You may ignore the difference between the specific heat at constant pressure and the specific heat at constant volume.) (b) Evaluate the specific heat c of iron. Explain how it compares with the value listed in Table 20.1. (c) Repeat the evaluation and comparison for gold.
51. A certain ideal gas has a molar specific heat of $C_V = \frac{7}{2}R$. A 2.00-mol sample of the gas always starts at pressure $1.00 \times 10^5 \text{ Pa}$ and temperature 300 K . For each of the following processes, determine (a) the final pressure, (b) the final volume, (c) the final temperature, (d) the change in internal energy of the gas, (e) the energy added to the gas by heat, and (f) the work done on the gas. (i) The gas is heated at constant pressure to 400 K . (ii) The gas is heated at constant volume to 400 K . (iii) The gas is compressed at constant temperature to $1.20 \times 10^5 \text{ Pa}$. (iv) The gas is compressed adiabatically to $1.20 \times 10^5 \text{ Pa}$.
52. The compressibility κ of a substance is defined as the fractional change in volume of that substance for a given change in pressure:
- $$\kappa = -\frac{1}{V} \frac{dV}{dP}$$
- (a) Explain why the negative sign in this expression ensures κ is always positive. (b) Show that if an ideal gas is compressed isothermally, its compressibility is given by $\kappa_1 = 1/P$. (c) **What If?** Show that if an ideal gas is compressed adiabatically, its compressibility is given by $\kappa_2 = 1/(\gamma P)$. Determine values for (d) κ_1 and (e) κ_2 for a monatomic ideal gas at a pressure of 2.00 atm .
53. **Review.** Oxygen at pressures much greater than 1 atm is toxic to lung cells. Assume a deep-sea diver breathes a mixture of oxygen (O_2) and helium (He). By weight, what ratio of helium to oxygen must be used if the diver is at an ocean depth of 50.0 m ?
54. Examine the data for polyatomic gases in Table 21.2 and give a reason why sulfur dioxide has a higher specific heat at constant volume than the other polyatomic gases at 300 K .
55. Model air as a diatomic ideal gas with $M = 28.9 \text{ g/mol}$. A cylinder with a piston contains 1.20 kg of air at 25.0°C and $2.00 \times 10^5 \text{ Pa}$. Energy is transferred by heat into the system as it is permitted to expand, with the pressure rising to $4.00 \times 10^5 \text{ Pa}$. Throughout the expansion, the relationship between pressure and volume is given by

$$P = CV^{1/2}$$

where C is a constant. Find (a) the initial volume, (b) the final volume, (c) the final temperature, (d) the work done on the air, and (e) the energy transferred by heat.

- 56. Review.** As a sound wave passes through a gas, the compressions are either so rapid or so far apart that thermal conduction is prevented by a negligible time interval or by effective thickness of insulation. The compressions and rarefactions are adiabatic. (a) Show that the speed of sound in an ideal gas is

$$v = \sqrt{\frac{\gamma RT}{M}}$$

where M is the molar mass. The speed of sound in a gas is given by Equation 17.8; use that equation and the definition of the bulk modulus from Section 12.4. (b) Compute the theoretical speed of sound in air at 20.0°C and state how it compares with the value in Table 17.1. Take $M = 28.9$ g/mol. (c) Show that the speed of sound in an ideal gas is

$$v = \sqrt{\frac{\gamma k_B T}{m_0}}$$

where m_0 is the mass of one molecule. (d) State how the result in part (c) compares with the most probable, average, and rms molecular speeds.

- 57.** Twenty particles, each of mass m_0 and confined to a volume V , have various speeds: two have speed v , three have speed $2v$, five have speed $3v$, four have speed $4v$, three have speed $5v$, two have speed $6v$, and one has speed $7v$. Find (a) the average speed, (b) the rms speed, (c) the most probable speed, (d) the average pressure the particles exert on the walls of the vessel, and (e) the average kinetic energy per particle.

- 58.** In a cylinder, a sample of an ideal gas with number of moles n undergoes an adiabatic process. (a) Starting with the expression $W = -\int P dV$ and using the condition $PV^\gamma = \text{constant}$, show that the work done on the gas is

$$W = \left(\frac{1}{\gamma - 1}\right)(P_f V_f - P_i V_i)$$

(b) Starting with the first law of thermodynamics, show that the work done on the gas is equal to $nC_V(T_f - T_i)$. (c) Are these two results consistent with each other? Explain.

- 59.** As a 1.00-mol sample of a monatomic ideal gas expands adiabatically, the work done on it is -2.50×10^3 J. The initial temperature and pressure of the gas are 500 K and 3.60 atm. Calculate (a) the final temperature and (b) the final pressure.
- 60.** A sample consists of an amount n in moles of a monatomic ideal gas. The gas expands adiabatically, with work W done on it. (Work W is a negative number.) The initial temperature and pressure of the gas are T_i and P_i . Calculate (a) the final temperature and (b) the final pressure.
- 61.** When a small particle is suspended in a fluid, bombardment by molecules makes the particle jitter about at random. Robert Brown discovered this motion in 1827 while studying plant fertilization, and the motion has become known as *Brownian motion*. The particle's average kinetic energy can be taken as $\frac{3}{2}k_B T$, the same

as that of a molecule in an ideal gas. Consider a spherical particle of density 1.00×10^3 kg/m³ in water at 20.0°C . (a) For a particle of diameter d , evaluate the rms speed. (b) The particle's actual motion is a random walk, but imagine that it moves with constant velocity equal in magnitude to its rms speed. In what time interval would it move by a distance equal to its own diameter? (c) Evaluate the rms speed and the time interval for a particle of diameter 3.00 μm . (d) Evaluate the rms speed and the time interval for a sphere of mass 70.0 kg, modeling your own body.

- 62.** A vessel contains 1.00×10^4 oxygen molecules at 500 K. (a) Make an accurate graph of the Maxwell speed distribution function versus speed with points at speed intervals of 100 m/s. (b) Determine the most probable speed from this graph. (c) Calculate the average and rms speeds for the molecules and label these points on your graph. (d) From the graph, estimate the fraction of molecules with speeds in the range 300 m/s to 600 m/s.
- 63. AMT** A pitcher throws a 0.142-kg baseball at 47.2 m/s. As it travels 16.8 m to home plate, the ball slows down to 42.5 m/s because of air resistance. Find the change in temperature of the air through which it passes. To find the greatest possible temperature change, you may make the following assumptions. Air has a molar specific heat of $C_p = \frac{7}{2}R$ and an equivalent molar mass of 28.9 g/mol. The process is so rapid that the cover of the baseball acts as thermal insulation and the temperature of the ball itself does not change. A change in temperature happens initially only for the air in a cylinder 16.8 m in length and 3.70 cm in radius. This air is initially at 20.0°C .
- 64.** The latent heat of vaporization for water at room temperature is 2430 J/g. Consider one particular molecule at the surface of a glass of liquid water, moving upward with sufficiently high speed that it will be the next molecule to join the vapor. (a) Find its translational kinetic energy. (b) Find its speed. Now consider a thin gas made only of molecules like that one. (c) What is its temperature? (d) Why are you not burned by water evaporating from a vessel at room temperature?
- 65.** A sample of a monatomic ideal gas occupies 5.00 L at atmospheric pressure and 300 K (point *A* in Fig. P21.65). It is warmed at constant volume to 3.00 atm (point *B*). Then it is allowed to expand isothermally to 1.00 atm (point *C*) and at last compressed isobarically to its original state. (a) Find the number of moles in the sample.

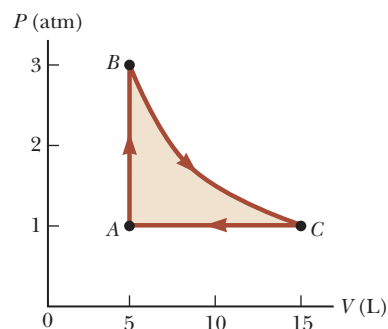


Figure P21.65

Find (b) the temperature at point B , (c) the temperature at point C , and (d) the volume at point C . (e) Now consider the processes $A \rightarrow B$, $B \rightarrow C$, and $C \rightarrow A$. Describe how to carry out each process experimentally. (f) Find Q , W , and ΔE_{int} for each of the processes. (g) For the whole cycle $A \rightarrow B \rightarrow C \rightarrow A$, find Q , W , and ΔE_{int} .

66. Consider the particles in a gas centrifuge, a device used to separate particles of different mass by whirling them in a circular path of radius r at angular speed ω . The force acting on a gas molecule toward the center of the centrifuge is $m_0\omega^2r$. (a) Discuss how a gas centrifuge can be used to separate particles of different mass. (b) Suppose the centrifuge contains a gas of particles of identical mass. Show that the density of the particles as a function of r is

$$n(r) = n_0 e^{m_0 r^2 \omega^2 / 2k_B T}$$

67. For a Maxwellian gas, use a computer or programmable calculator to find the numerical value of the ratio $N_v(v)/N_v(v_{\text{mp}})$ for the following values of v : (a) $v = (v_{\text{mp}}/50.0)$, (b) $(v_{\text{mp}}/10.0)$, (c) $(v_{\text{mp}}/2.00)$, (d) v_{mp} , (e) $2.00v_{\text{mp}}$, (f) $10.0v_{\text{mp}}$, and (g) $50.0v_{\text{mp}}$. Give your results to three significant figures.

68. A triatomic molecule can have a linear configuration, as does CO_2 (Fig. P21.68a), or it can be nonlinear, like H_2O (Fig. P21.68b). Suppose the temperature of a gas of triatomic molecules is sufficiently low that vibrational motion is negligible. What is the molar specific heat at constant volume, expressed as a multiple of the universal gas constant, (a) if the molecules are linear and (b) if the molecules are nonlinear? At high temperatures, a triatomic molecule has two modes of vibration, and each contributes $\frac{1}{2}R$ to the molar specific heat for its kinetic energy and another $\frac{1}{2}R$ for its potential energy. Identify the high-temperature molar specific heat at constant volume for a triatomic ideal gas of (c) linear molecules and (d) nonlinear molecules. (e) Explain how specific heat data can be used to determine whether a triatomic molecule is linear or nonlinear. Are the data in Table 21.2 sufficient to make this determination?

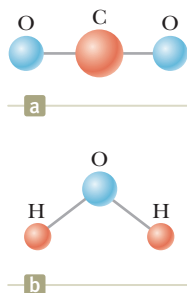


Figure P21.68

69. Using the Maxwell-Boltzmann speed distribution function, verify Equations 21.42 and 21.43 for (a) the rms speed and (b) the average speed of the molecules of a gas at a temperature T . The average value of v^n is

$$\bar{v}^n = \frac{1}{N} \int_0^\infty v^n N_v dv$$

Use the table of integrals B.6 in Appendix B.

70. On the PV diagram for an ideal gas, one isothermal curve and one adiabatic curve pass through each point as shown in Figure P21.70. Prove that the slope of the adiabatic curve is steeper than the slope of the isotherm at that point by the factor γ .

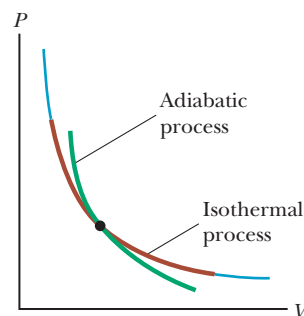


Figure P21.70

71. In Beijing, a restaurant keeps a pot of chicken broth simmering continuously. Every morning, it is topped up to contain 10.0 L of water along with a fresh chicken, vegetables, and spices. The molar mass of water is 18.0 g/mol. (a) Find the number of molecules of water in the pot. (b) During a certain month, 90.0% of the broth was served each day to people who then emigrated immediately. Of the water molecules in the pot on the first day of the month, when was the last one likely to have been ladled out of the pot? (c) The broth has been simmering for centuries, through wars, earthquakes, and stove repairs. Suppose the water that was in the pot long ago has thoroughly mixed into the Earth's hydrosphere, of mass 1.32×10^{21} kg. How many of the water molecules originally in the pot are likely to be present in it again today?
72. **Review.** (a) If it has enough kinetic energy, a molecule at the surface of the Earth can "escape the Earth's gravitation" in the sense that it can continue to move away from the Earth forever as discussed in Section 13.6. Using the principle of conservation of energy, show that the minimum kinetic energy needed for "escape" is $m_0 g R_E$, where m_0 is the mass of the molecule, g is the free-fall acceleration at the surface, and R_E is the radius of the Earth. (b) Calculate the temperature for which the minimum escape kinetic energy is ten times the average kinetic energy of an oxygen molecule.
73. Using multiple laser beams, physicists have been able to cool and trap sodium atoms in a small region. In one experiment, the temperature of the atoms was reduced to 0.240 mK. (a) Determine the rms speed of the sodium atoms at this temperature. The atoms can be trapped for about 1.00 s. The trap has a linear dimension of roughly 1.00 cm. (b) Over what approximate time interval would an atom wander out of the trap region if there were no trapping action?

Challenge Problems

74. Equations 21.42 and 21.43 show that $v_{\text{rms}} > v_{\text{avg}}$ for a collection of gas particles, which turns out to be true whenever the particles have a distribution of speeds. Let us explore this inequality for a two-particle gas.

Let the speed of one particle be $v_1 = av_{\text{avg}}$ and the other particle have speed $v_2 = (2 - a)v_{\text{avg}}$. (a) Show that the average of these two speeds is v_{avg} . (b) Show that

$$v_{\text{rms}}^2 = v_{\text{avg}}^2 (2 - 2a + a^2)$$

(c) Argue that the equation in part (b) proves that, in general, $v_{\text{rms}} > v_{\text{avg}}$. (d) Under what special condition will $v_{\text{rms}} = v_{\text{avg}}$ for the two-particle gas?

- 75. AMT** A cylinder is closed at both ends and has insulating walls. It is divided into two compartments by an insulating piston that is perpendicular to the axis of the cylinder as shown in Figure P21.75a. Each compartment contains 1.00 mol of oxygen that behaves as an ideal gas with $\gamma = 1.40$. Initially, the two compartments have equal volumes and their temperatures are 550 K and 250 K. The piston is then allowed to move slowly

parallel to the axis of the cylinder until it comes to rest at an equilibrium position (Fig. P21.75b). Find the final temperatures in the two compartments.

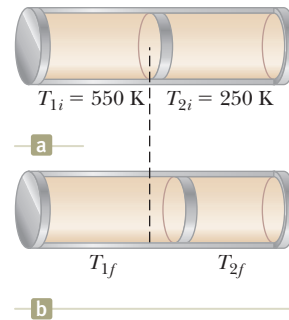


Figure P21.75

Heat Engines, Entropy, and the Second Law of Thermodynamics

CHAPTER

22



- 22.1 Heat Engines and the Second Law of Thermodynamics
- 22.2 Heat Pumps and Refrigerators
- 22.3 Reversible and Irreversible Processes
- 22.4 The Carnot Engine
- 22.5 Gasoline and Diesel Engines
- 22.6 Entropy
- 22.7 Changes in Entropy for Thermodynamic Systems
- 22.8 Entropy and the Second Law

The first law of thermodynamics, which we studied in Chapter 20, is a statement of conservation of energy and is a special-case reduction of Equation 8.2. This law states that a change in internal energy in a system can occur as a result of energy transfer by heat, by work, or by both. Although the first law of thermodynamics is very important, it makes no distinction between processes that occur spontaneously and those that do not. Only certain types of energy transformation and energy transfer processes actually take place in nature, however. The *second law of thermodynamics*, the major topic in this chapter, establishes which processes do and do not occur. The following are examples

A Stirling engine from the early nineteenth century. Air is heated in the lower cylinder using an external source. As this happens, the air expands and pushes against a piston, causing it to move. The air is then cooled, allowing the cycle to begin again. This is one example of a heat engine, which we study in this chapter. (©SSPL/The Image Works)



© Mary Evans Picture Library/Alamy

Lord Kelvin

British physicist and mathematician (1824–1907)

Born William Thomson in Belfast, Kelvin was the first to propose the use of an absolute scale of temperature. The Kelvin temperature scale is named in his honor. Kelvin's work in thermodynamics led to the idea that energy cannot pass spontaneously from a colder object to a hotter object.

of processes that do not violate the first law of thermodynamics if they proceed in either direction, but are observed in reality to proceed in only one direction:

- When two objects at different temperatures are placed in thermal contact with each other, the net transfer of energy by heat is always from the warmer object to the cooler object, never from the cooler to the warmer.
- A rubber ball dropped to the ground bounces several times and eventually comes to rest, but a ball lying on the ground never gathers internal energy from the ground and begins bouncing on its own.
- An oscillating pendulum eventually comes to rest because of collisions with air molecules and friction at the point of suspension. The mechanical energy of the system is converted to internal energy in the air, the pendulum, and the suspension; the reverse conversion of energy never occurs.

All these processes are *irreversible*; that is, they are processes that occur naturally in one direction only. No irreversible process has ever been observed to run backward. If it were to do so, it would violate the second law of thermodynamics.¹

22.1 Heat Engines and the Second Law of Thermodynamics

A **heat engine** is a device that takes in energy by heat² and, operating in a cyclic process, expels a fraction of that energy by means of work. For instance, in a typical process by which a power plant produces electricity, a fuel such as coal is burned and the high-temperature gases produced are used to convert liquid water to steam. This steam is directed at the blades of a turbine, setting it into rotation. The mechanical energy associated with this rotation is used to drive an electric generator. Another device that can be modeled as a heat engine is the internal combustion engine in an automobile. This device uses energy from a burning fuel to perform work on pistons that results in the motion of the automobile.

Let us consider the operation of a heat engine in more detail. A heat engine carries some working substance through a cyclic process during which (1) the working substance absorbs energy by heat from a high-temperature energy reservoir, (2) work is done by the engine, and (3) energy is expelled by heat to a lower-temperature reservoir. As an example, consider the operation of a steam engine (Fig. 22.1), which uses water as the working substance. The water in a boiler absorbs energy from burning fuel and evaporates to steam, which then does work by expanding against a piston. After the steam cools and condenses, the liquid water produced returns to the boiler and the cycle repeats.

It is useful to represent a heat engine schematically as in Figure 22.2. The engine absorbs a quantity of energy $|Q_h|$ from the hot reservoir. For the mathematical discussion of heat engines, we use absolute values to make all energy transfers by heat positive, and the direction of transfer is indicated with an explicit positive or negative sign. The engine does work W_{eng} (so that *negative* work $W = -W_{\text{eng}}$ is done *on* the engine) and then gives up a quantity of energy $|Q_c|$ to the cold reservoir.



© Andy Moore/Photolibary/Jupiterimages

Figure 22.1 A steam-driven locomotive obtains its energy by burning wood or coal. The generated energy vaporizes water into steam, which powers the locomotive. Modern locomotives use diesel fuel instead of wood or coal. Whether old-fashioned or modern, such locomotives can be modeled as heat engines, which extract energy from a burning fuel and convert a fraction of it to mechanical energy.

¹Although a process occurring in the time-reversed sense has never been *observed*, it is *possible* for it to occur. As we shall see later in this chapter, however, the probability of such a process occurring is infinitesimally small. From this viewpoint, processes occur with a vastly greater probability in one direction than in the opposite direction.

²We use heat as our model for energy transfer into a heat engine. Other methods of energy transfer are possible in the model of a heat engine, however. For example, the Earth's atmosphere can be modeled as a heat engine in which the input energy transfer is by means of electromagnetic radiation from the Sun. The output of the atmospheric heat engine causes the wind structure in the atmosphere.

Because the working substance goes through a cycle, its initial and final internal energies are equal: $\Delta E_{\text{int}} = 0$. Hence, from the first law of thermodynamics, $\Delta E_{\text{int}} = Q + W = Q - W_{\text{eng}} = 0$, and the net work W_{eng} done by a heat engine is equal to the net energy Q_{net} transferred to it. As you can see from Figure 22.2, $Q_{\text{net}} = |Q_h| - |Q_c|$; therefore,

$$W_{\text{eng}} = |Q_h| - |Q_c| \quad (22.1)$$

The **thermal efficiency** e of a heat engine is defined as the ratio of the net work done by the engine during one cycle to the energy input at the higher temperature during the cycle:

$$e \equiv \frac{W_{\text{eng}}}{|Q_h|} = \frac{|Q_h| - |Q_c|}{|Q_h|} = 1 - \frac{|Q_c|}{|Q_h|} \quad (22.2)$$

You can think of the efficiency as the ratio of what you gain (work) to what you give (energy transfer at the higher temperature). In practice, all heat engines expel only a fraction of the input energy Q_h by mechanical work; consequently, their efficiency is always less than 100%. For example, a good automobile engine has an efficiency of about 20%, and diesel engines have efficiencies ranging from 35% to 40%.

Equation 22.2 shows that a heat engine has 100% efficiency ($e = 1$) only if $|Q_c| = 0$, that is, if no energy is expelled to the cold reservoir. In other words, a heat engine with perfect efficiency would have to expel all the input energy by work. Because efficiencies of real engines are well below 100%, the **Kelvin–Planck form of the second law of thermodynamics** states the following:

It is impossible to construct a heat engine that, operating in a cycle, produces no effect other than the input of energy by heat from a reservoir and the performance of an equal amount of work.

This statement of the second law means that during the operation of a heat engine, W_{eng} can never be equal to $|Q_h|$ or, alternatively, that some energy $|Q_c|$ *must* be rejected to the environment. Figure 22.3 is a schematic diagram of the impossible “perfect” heat engine.

- Quick Quiz 22.1** The energy input to an engine is 4.00 times greater than the work it performs. (i) What is its thermal efficiency? (a) 4.00 (b) 1.00 (c) 0.250 (d) impossible to determine (ii) What fraction of the energy input is expelled to the cold reservoir? (a) 0.250 (b) 0.750 (c) 1.00 (d) impossible to determine

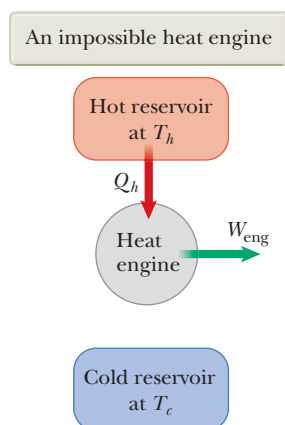


Figure 22.3 Schematic diagram of a heat engine that takes in energy from a hot reservoir and does an equivalent amount of work. It is impossible to construct such a perfect engine.

◀ Thermal efficiency of a heat engine

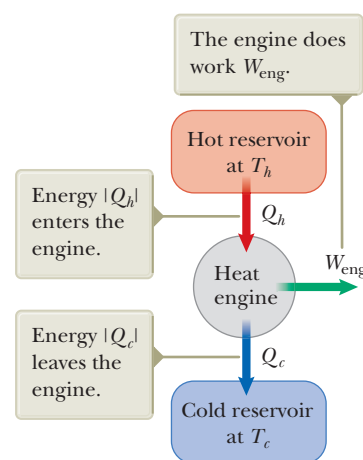


Figure 22.2 Schematic representation of a heat engine.

Pitfall Prevention 22.1

The First and Second Laws Notice the distinction between the first and second laws of thermodynamics. If a gas undergoes a *one-time isothermal process*, then $\Delta E_{\text{int}} = Q + W = 0$ and $W = -Q$. Therefore, the first law allows *all* energy input by heat to be expelled by work. In a heat engine, however, in which a substance undergoes a *cyclic* process, only a *portion* of the energy input by heat can be expelled by work according to the second law.

Example 22.1 The Efficiency of an Engine

An engine transfers $2.00 \times 10^3 \text{ J}$ of energy from a hot reservoir during a cycle and transfers $1.50 \times 10^3 \text{ J}$ as exhaust to a cold reservoir.

(A) Find the efficiency of the engine.

SOLUTION

Conceptualize Review Figure 22.2; think about energy going into the engine from the hot reservoir and splitting, with part coming out by work and part by heat into the cold reservoir.

Categorize This example involves evaluation of quantities from the equations introduced in this section, so we categorize it as a substitution problem.

Find the efficiency of the engine from Equation 22.2:

$$e = 1 - \frac{|Q_c|}{|Q_h|} = 1 - \frac{1.50 \times 10^3 \text{ J}}{2.00 \times 10^3 \text{ J}} = 0.250, \text{ or } 25.0\%$$

(B) How much work does this engine do in one cycle?

SOLUTION

Find the work done by the engine by taking the difference between the input and output energies:

$$W_{\text{eng}} = |Q_h| - |Q_c| = 2.00 \times 10^3 \text{ J} - 1.50 \times 10^3 \text{ J} = 5.0 \times 10^2 \text{ J}$$

WHAT IF? Suppose you were asked for the power output of this engine. Do you have sufficient information to answer this question?

Answer No, you do not have enough information. The power of an engine is the *rate* at which work is done by the engine. You know how much work is done per cycle, but you have no information about the time interval associated with one cycle. If you were told that the engine operates at 2 000 rpm (revolutions per minute), however, you could relate this rate to the period of rotation T of the mechanism of the engine. Assuming there is one thermodynamic cycle per revolution, the power is

$$P = \frac{W_{\text{eng}}}{T} = \frac{5.0 \times 10^2 \text{ J}}{\left(\frac{1}{2000} \text{ min}\right)} \left(\frac{1 \text{ min}}{60 \text{ s}}\right) = 1.7 \times 10^4 \text{ W}$$

22.2 Heat Pumps and Refrigerators

In a heat engine, the direction of energy transfer is from the hot reservoir to the cold reservoir, which is the natural direction. The role of the heat engine is to process the energy from the hot reservoir so as to do useful work. What if we wanted to transfer energy from the cold reservoir to the hot reservoir? Because that is not the natural direction of energy transfer, we must put some energy into a device to be successful. Devices that perform this task are called **heat pumps** and **refrigerators**. For example, homes in summer are cooled using heat pumps called *air conditioners*. The air conditioner transfers energy from the cool room in the home to the warm air outside.

In a refrigerator or a heat pump, the engine takes in energy $|Q_c|$ from a cold reservoir and expels energy $|Q_h|$ to a hot reservoir (Fig. 22.4), which can be accomplished only if work is done *on* the engine. From the first law, we know that the energy given up to the hot reservoir must equal the sum of the work done and the energy taken in from the cold reservoir. Therefore, the refrigerator or heat pump transfers energy from a colder body (for example, the contents of a kitchen refrigerator or the winter air outside a building) to a hotter body (the air in the kitchen or a room in the building). In practice, it is desirable to carry out this process with

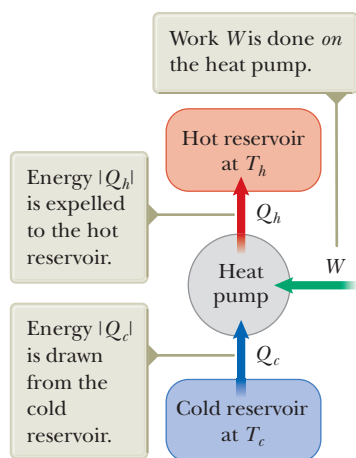


Figure 22.4 Schematic representation of a heat pump.

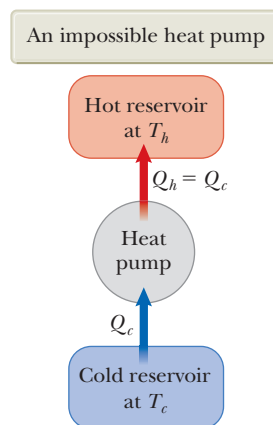


Figure 22.5 Schematic diagram of an impossible heat pump or refrigerator, that is, one that takes in energy from a cold reservoir and expels an equivalent amount of energy to a hot reservoir without the input of energy by work.

a minimum of work. If the process could be accomplished without doing any work, the refrigerator or heat pump would be “perfect” (Fig. 22.5). Again, the existence of such a device would be in violation of the second law of thermodynamics, which in the form of the **Clausius statement**³ states:

It is impossible to construct a cyclical machine whose sole effect is to transfer energy continuously by heat from one object to another object at a higher temperature without the input of energy by work.

In simpler terms, energy does not transfer spontaneously by heat from a cold object to a hot object. Work input is required to run a refrigerator.

The Clausius and Kelvin–Planck statements of the second law of thermodynamics appear at first sight to be unrelated, but in fact they are equivalent in all respects. Although we do not prove so here, if either statement is false, so is the other.⁴

In practice, a heat pump includes a circulating fluid that passes through two sets of metal coils that can exchange energy with the surroundings. The fluid is cold and at low pressure when it is in the coils located in a cool environment, where it absorbs energy by heat. The resulting warm fluid is then compressed and enters the other coils as a hot, high-pressure fluid. There it releases its stored energy to the warm surroundings. In an air conditioner, energy is absorbed into the fluid in coils located in a building’s interior; after the fluid is compressed, energy leaves the fluid through coils located outdoors. In a refrigerator, the external coils are behind the unit (Fig. 22.6) or underneath the unit. The internal coils are in the walls of the refrigerator and absorb energy from the food.

The effectiveness of a heat pump is described in terms of a number called the **coefficient of performance** (COP). The COP is similar to the thermal efficiency for a heat engine in that it is a ratio of what you gain (energy transferred to or from a reservoir) to what you give (work input). For a heat pump operating in the cooling mode, “what you gain” is energy removed from the cold reservoir. The most effective refrigerator or air conditioner is one that removes the greatest amount of energy



Figure 22.6 The back of a household refrigerator. The air surrounding the coils is the hot reservoir.

³First expressed by Rudolf Clausius (1822–1888).

⁴See an advanced textbook on thermodynamics for this proof.

from the cold reservoir in exchange for the least amount of work. Therefore, for these devices operating in the cooling mode, we define the COP in terms of $|Q_c|$:

$$\text{COP (cooling mode)} = \frac{\text{energy transferred at low temperature}}{\text{work done on heat pump}} = \frac{|Q_c|}{W} \quad (22.3)$$

A good refrigerator should have a high COP, typically 5 or 6.

In addition to cooling applications, heat pumps are becoming increasingly popular for heating purposes. The energy-absorbing coils for a heat pump are located outside a building, in contact with the air or buried in the ground. The other set of coils are in the building's interior. The circulating fluid flowing through the coils absorbs energy from the outside and releases it to the interior of the building from the interior coils.

In the heating mode, the COP of a heat pump is defined as the ratio of the energy transferred to the hot reservoir to the work required to transfer that energy:

$$\text{COP (heating mode)} = \frac{\text{energy transferred at high temperature}}{\text{work done on heat pump}} = \frac{|Q_h|}{W} \quad (22.4)$$

If the outside temperature is 25°F (−4°C) or higher, a typical value of the COP for a heat pump is about 4. That is, the amount of energy transferred to the building is about four times greater than the work done by the motor in the heat pump. As the outside temperature decreases, however, it becomes more difficult for the heat pump to extract sufficient energy from the air and so the COP decreases. Therefore, the use of heat pumps that extract energy from the air, although satisfactory in moderate climates, is not appropriate in areas where winter temperatures are very low. It is possible to use heat pumps in colder areas by burying the external coils deep in the ground. In that case, the energy is extracted from the ground, which tends to be warmer than the air in the winter.

- Quick Quiz 22.2** The energy entering an electric heater by electrical transmission can be converted to internal energy with an efficiency of 100%. By what factor does the cost of heating your home change when you replace your electric heating system with an electric heat pump that has a COP of 4.00? Assume the motor running the heat pump is 100% efficient. (a) 4.00 (b) 2.00 (c) 0.500 (d) 0.250

Example 22.2 Freezing Water

A certain refrigerator has a COP of 5.00. When the refrigerator is running, its power input is 500 W. A sample of water of mass 500 g and temperature 20.0°C is placed in the freezer compartment. How long does it take to freeze the water to ice at 0°C? Assume all other parts of the refrigerator stay at the same temperature and there is no leakage of energy from the exterior, so the operation of the refrigerator results only in energy being extracted from the water.

SOLUTION

Conceptualize Energy leaves the water, reducing its temperature and then freezing it into ice. The time interval required for this entire process is related to the rate at which energy is withdrawn from the water, which, in turn, is related to the power input of the refrigerator.

Categorize We categorize this example as one that combines our understanding of temperature changes and phase changes from Chapter 20 and our understanding of heat pumps from this chapter.

Analyze Use the power rating of the refrigerator to find the time interval Δt required for the freezing process to occur:

$$P = \frac{W}{\Delta t} \rightarrow \Delta t = \frac{W}{P}$$

► 22.2 continued

Use Equation 22.3 to relate the work W done on the heat pump to the energy $|Q_c|$ extracted from the water:

$$\Delta t = \frac{|Q_c|}{P(\text{COP})}$$

Use Equations 20.4 and 20.7 to substitute the amount of energy $|Q_c|$ that must be extracted from the water of mass m :

$$\Delta t = \frac{|mc \Delta T + L_f \Delta m|}{P(\text{COP})}$$

Recognize that the amount of water that freezes is $\Delta m = -m$ because all the water freezes:

$$\Delta t = \frac{|m(c \Delta T - L_f)|}{P(\text{COP})}$$

Substitute numerical values:

$$\begin{aligned} \Delta t &= \frac{|(0.500 \text{ kg})[(4186 \text{ J/kg} \cdot ^\circ\text{C})(-20.0^\circ\text{C}) - 3.33 \times 10^5 \text{ J/kg}]|}{(500 \text{ W})(5.00)} \\ &= 83.3 \text{ s} \end{aligned}$$

Finalize In reality, the time interval for the water to freeze in a refrigerator is much longer than 83.3 s, which suggests that the assumptions of our model are not valid. Only a small part of the energy extracted from the refrigerator interior in a given time interval comes from the water. Energy must also be extracted from the container in which the water is placed, and energy that continuously leaks into the interior from the exterior must be extracted.

22.3 Reversible and Irreversible Processes

In the next section, we will discuss a theoretical heat engine that is the most efficient possible. To understand its nature, we must first examine the meaning of reversible and irreversible processes. In a **reversible** process, the system undergoing the process can be returned to its initial conditions along the same path on a PV diagram, and every point along this path is an equilibrium state. A process that does not satisfy these requirements is **irreversible**.

All natural processes are known to be irreversible. Let's examine the adiabatic free expansion of a gas, which was already discussed in Section 20.6, and show that it cannot be reversible. Consider a gas in a thermally insulated container as shown in Figure 22.7. A membrane separates the gas from a vacuum. When the membrane is punctured, the gas expands freely into the vacuum. As a result of the puncture, the system has changed because it occupies a greater volume after the expansion. Because the gas does not exert a force through a displacement, it does no work on the surroundings as it expands. In addition, no energy is transferred to or from the gas by heat because the container is insulated from its surroundings. Therefore, in this adiabatic process, the system has changed but the surroundings have not.

For this process to be reversible, we must return the gas to its original volume and temperature without changing the surroundings. Imagine trying to reverse the process by compressing the gas to its original volume. To do so, we fit the container with a piston and use an engine to force the piston inward. During this process, the surroundings change because work is being done by an outside agent on the system. In addition, the system changes because the compression increases the temperature of the gas. The temperature of the gas can be lowered by allowing it to come into contact with an external energy reservoir. Although this step returns the gas to its original conditions, the surroundings are again affected because energy is being added to the surroundings from the gas. If this

Pitfall Prevention 22.2

All Real Processes Are Irreversible

The reversible process is an idealization; all real processes on the Earth are irreversible.

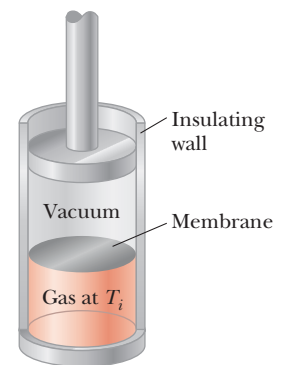


Figure 22.7 Adiabatic free expansion of a gas.

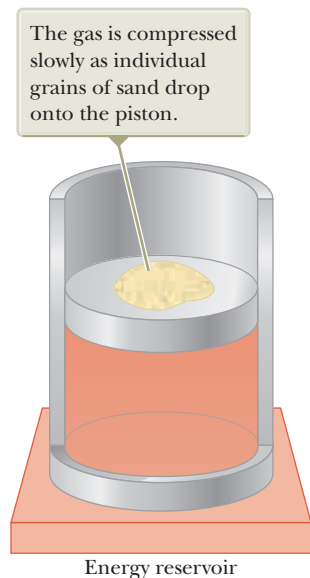


Figure 22.8 A method for compressing a gas in an almost reversible isothermal process.

energy could be used to drive the engine that compressed the gas, the net energy transfer to the surroundings would be zero. In this way, the system and its surroundings could be returned to their initial conditions and we could identify the process as reversible. The Kelvin–Planck statement of the second law, however, specifies that the energy removed from the gas to return the temperature to its original value cannot be completely converted to mechanical energy by the process of work done by the engine in compressing the gas. Therefore, we must conclude that the process is irreversible.

We could also argue that the adiabatic free expansion is irreversible by relying on the portion of the definition of a reversible process that refers to equilibrium states. For example, during the sudden expansion, significant variations in pressure occur throughout the gas. Therefore, there is no well-defined value of the pressure for the entire system at any time between the initial and final states. In fact, the process cannot even be represented as a path on a PV diagram. The PV diagram for an adiabatic free expansion would show the initial and final conditions as points, but these points would not be connected by a path. Therefore, because the intermediate conditions between the initial and final states are not equilibrium states, the process is irreversible.

Although all real processes are irreversible, some are almost reversible. If a real process occurs very slowly such that the system is always very nearly in an equilibrium state, the process can be approximated as being reversible. Suppose a gas is compressed isothermally in a piston–cylinder arrangement in which the gas is in thermal contact with an energy reservoir and we continuously transfer just enough energy from the gas to the reservoir to keep the temperature constant. For example, imagine that the gas is compressed very slowly by dropping grains of sand onto a frictionless piston as shown in Figure 22.8. As each grain lands on the piston and compresses the gas a small amount, the system deviates from an equilibrium state, but it is so close to one that it achieves a new equilibrium state in a relatively short time interval. Each grain added represents a change to a new equilibrium state, but the differences between states are so small that the entire process can be approximated as occurring through continuous equilibrium states. The process can be reversed by slowly removing grains from the piston.

A general characteristic of a reversible process is that no nonconservative effects (such as turbulence or friction) that transform mechanical energy to internal energy can be present. Such effects can be impossible to eliminate completely. Hence, it is not surprising that real processes in nature are irreversible.

Pitfall Prevention 22.3

Don't Shop for a Carnot Engine

The Carnot engine is an idealization; do not expect a Carnot engine to be developed for commercial use. We explore the Carnot engine only for theoretical considerations.

22.4 The Carnot Engine

In 1824, a French engineer named Sadi Carnot described a theoretical engine, now called a **Carnot engine**, that is of great importance from both practical and theoretical viewpoints. He showed that a heat engine operating in an ideal, reversible cycle—called a **Carnot cycle**—between two energy reservoirs is the most efficient engine possible. Such an ideal engine establishes an upper limit on the efficiencies of all other engines. That is, the net work done by a working substance taken through the Carnot cycle is the greatest amount of work possible for a given amount of energy supplied to the substance at the higher temperature. **Carnot's theorem** can be stated as follows:

No real heat engine operating between two energy reservoirs can be more efficient than a Carnot engine operating between the same two reservoirs.

In this section, we will show that the efficiency of a Carnot engine depends only on the temperatures of the reservoirs. In turn, that efficiency represents the

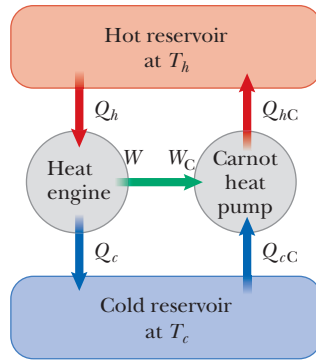


Figure 22.9 A Carnot engine operated as a heat pump and another engine with a proposed higher efficiency operate between two energy reservoirs. The work output and input are matched.

maximum possible efficiency for real engines. Let us confirm that the Carnot engine is the most efficient. We imagine a hypothetical engine with an efficiency greater than that of the Carnot engine. Consider Figure 22.9, which shows the hypothetical engine with $e > e_C$ on the left connected between hot and cold reservoirs. In addition, let us attach a Carnot engine between the same reservoirs. Because the Carnot cycle is reversible, the Carnot engine can be run in reverse as a Carnot heat pump as shown on the right in Figure 22.9. We match the output work of the engine to the input work of the heat pump, $W = W_C$, so there is no exchange of energy by work between the surroundings and the engine–heat pump combination.

Because of the proposed relation between the efficiencies, we must have

$$e > e_C \rightarrow \frac{|W|}{|Q_h|} > \frac{|W_C|}{|Q_{hC}|}$$

The numerators of these two fractions cancel because the works have been matched. This expression requires that

$$|Q_{hC}| > |Q_h| \quad (22.5)$$

From Equation 22.1, the equality of the works gives us

$$|W| = |W_C| \rightarrow |Q_h| - |Q_c| = |Q_{hC}| - |Q_{cC}|$$

which can be rewritten to put the energies exchanged with the cold reservoir on the left and those with the hot reservoir on the right:

$$|Q_{hC}| - |Q_h| = |Q_{cC}| - |Q_c| \quad (22.6)$$

Note that the left side of Equation 22.6 is positive, so the right side must be positive also. We see that the net energy exchange with the hot reservoir is equal to the net energy exchange with the cold reservoir. As a result, for the combination of the heat engine and the heat pump, energy is transferring from the cold reservoir to the hot reservoir by heat with no input of energy by work.

This result is in violation of the Clausius statement of the second law. Therefore, our original assumption that $e > e_C$ must be incorrect, and we must conclude that the Carnot engine represents the highest possible efficiency for an engine. The key feature of the Carnot engine that makes it the most efficient is its *reversibility*; it can be run in reverse as a heat pump. All real engines are less efficient than the Carnot engine because they do not operate through a reversible cycle. The efficiency of a real engine is further reduced by such practical difficulties as friction and energy losses by conduction.

To describe the Carnot cycle taking place between temperatures T_c and T_h , let's assume the working substance is an ideal gas contained in a cylinder fitted with a movable piston at one end. The cylinder's walls and the piston are thermally non-conducting. Four stages of the Carnot cycle are shown in Figure 22.10 (page 662),

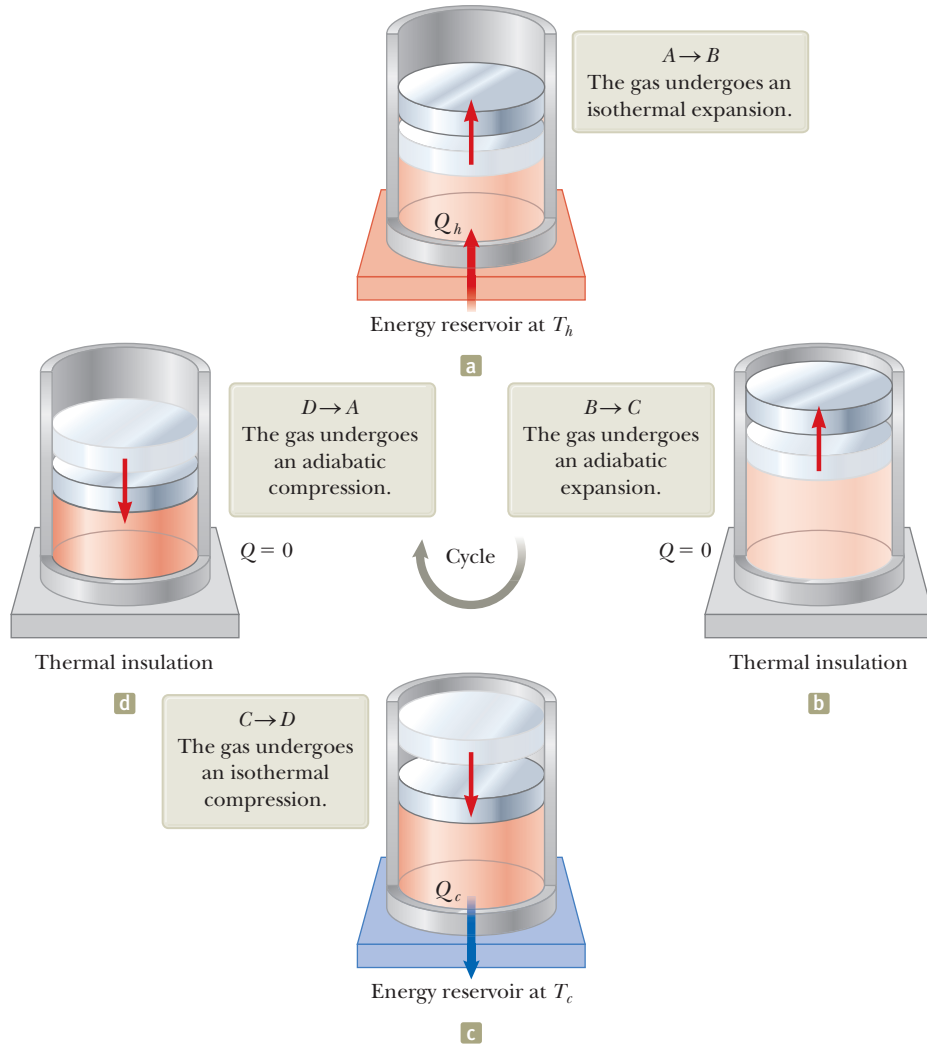


Sadi Carnot

French engineer (1796–1832)

Carnot was the first to show the quantitative relationship between work and heat. In 1824, he published his only work, *Reflections on the Motive Power of Heat*, which reviewed the industrial, political, and economic importance of the steam engine. In it, he defined work as "weight lifted through a height."

Figure 22.10 The Carnot cycle. The letters A , B , C , and D refer to the states of the gas shown in Figure 22.11. The arrows on the piston indicate the direction of its motion during each process.



and the PV diagram for the cycle is shown in Figure 22.11. The Carnot cycle consists of two adiabatic processes and two isothermal processes, all reversible:

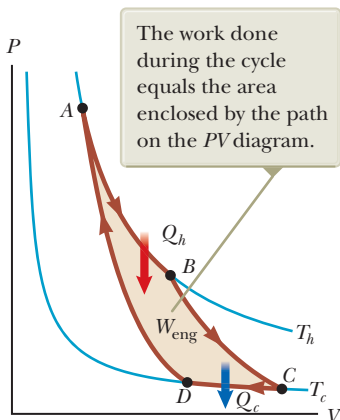


Figure 22.11 PV diagram for the Carnot cycle. The net work done W_{eng} equals the net energy transferred into the Carnot engine in one cycle, $|Q_h| - |Q_c|$.

1. Process $A \rightarrow B$ (Fig. 22.10a) is an isothermal expansion at temperature T_h . The gas is placed in thermal contact with an energy reservoir at temperature T_h . During the expansion, the gas absorbs energy $|Q_h|$ from the reservoir through the base of the cylinder and does work W_{AB} in raising the piston.
2. In process $B \rightarrow C$ (Fig. 22.10b), the base of the cylinder is replaced by a thermally nonconducting wall and the gas expands adiabatically; that is, no energy enters or leaves the system by heat. During the expansion, the temperature of the gas decreases from T_h to T_c and the gas does work W_{BC} in raising the piston.
3. In process $C \rightarrow D$ (Fig. 22.10c), the gas is placed in thermal contact with an energy reservoir at temperature T_c and is compressed isothermally at temperature T_c . During this time, the gas expels energy $|Q_c|$ to the reservoir and the work done by the piston on the gas is W_{CD} .
4. In the final process $D \rightarrow A$ (Fig. 22.10d), the base of the cylinder is replaced by a nonconducting wall and the gas is compressed adiabatically. The temperature of the gas increases to T_h , and the work done by the piston on the gas is W_{DA} .

The thermal efficiency of the engine is given by Equation 22.2:

$$e = 1 - \frac{|Q_c|}{|Q_h|}$$

In Example 22.3, we show that for a Carnot cycle,

$$\frac{|Q_c|}{|Q_h|} = \frac{T_c}{T_h} \quad (22.7)$$

Hence, the thermal efficiency of a Carnot engine is

$$e_C = 1 - \frac{T_c}{T_h} \quad (22.8)$$

◀ Efficiency of a Carnot engine

This result indicates that all Carnot engines operating between the same two temperatures have the same efficiency.⁵

Equation 22.8 can be applied to any working substance operating in a Carnot cycle between two energy reservoirs. According to this equation, the efficiency is zero if $T_c = T_h$, as one would expect. The efficiency increases as T_c is lowered and T_h is raised. The efficiency can be unity (100%), however, only if $T_c = 0$ K. Such reservoirs are not available; therefore, the maximum efficiency is always less than 100%. In most practical cases, T_c is near room temperature, which is about 300 K. Therefore, one usually strives to increase the efficiency by raising T_h .

Theoretically, a Carnot-cycle heat engine run in reverse constitutes the most effective heat pump possible, and it determines the maximum COP for a given combination of hot and cold reservoir temperatures. Using Equations 22.1 and 22.4, we see that the maximum COP for a heat pump in its heating mode is

$$\begin{aligned} \text{COP}_C (\text{heating mode}) &= \frac{|Q_h|}{W} \\ &= \frac{|Q_h|}{|Q_h| - |Q_c|} = \frac{1}{1 - \frac{|Q_c|}{|Q_h|}} = \frac{1}{1 - \frac{T_c}{T_h}} = \frac{T_h}{T_h - T_c} \end{aligned}$$

The Carnot COP for a heat pump in the cooling mode is

$$\text{COP}_C (\text{cooling mode}) = \frac{T_c}{T_h - T_c}$$

As the difference between the temperatures of the two reservoirs approaches zero in this expression, the theoretical COP approaches infinity. In practice, the low temperature of the cooling coils and the high temperature at the compressor limit the COP to values below 10.

- Quick Quiz 22.3** Three engines operate between reservoirs separated in temperature by 300 K. The reservoir temperatures are as follows: Engine A: $T_h = 1\,000$ K, $T_c = 700$ K; Engine B: $T_h = 800$ K, $T_c = 500$ K; Engine C: $T_h = 600$ K, $T_c = 300$ K. Rank the engines in order of theoretically possible efficiency from highest to lowest.

⁵For the processes in the Carnot cycle to be reversible, they must be carried out infinitesimally slowly. Therefore, although the Carnot engine is the most efficient engine possible, it has zero power output because it takes an infinite time interval to complete one cycle! For a real engine, the short time interval for each cycle results in the working substance reaching a high temperature lower than that of the hot reservoir and a low temperature higher than that of the cold reservoir. An engine undergoing a Carnot cycle between this narrower temperature range was analyzed by F. L. Curzon and B. Ahlborn ("Efficiency of a Carnot engine at maximum power output," *Am. J. Phys.* **43**(1), 22, 1975), who found that the efficiency at maximum power output depends only on the reservoir temperatures T_c and T_h and is given by $e_{C-A} = 1 - (T_c/T_h)^{1/2}$. The Curzon-Ahlborn efficiency e_{C-A} provides a closer approximation to the efficiencies of real engines than does the Carnot efficiency.

Example 22.3 Efficiency of the Carnot Engine

Show that the ratio of energy transfers by heat in a Carnot engine is equal to the ratio of reservoir temperatures, as given by Equation 22.7.

SOLUTION

Conceptualize Make use of Figures 22.10 and 22.11 to help you visualize the processes in the Carnot cycle.

Categorize Because of our understanding of the Carnot cycle, we can categorize the processes in the cycle as isothermal and adiabatic.

Analyze For the isothermal expansion (process $A \rightarrow B$ in Fig. 22.10), find the energy transfer by heat from the hot reservoir using Equation 20.14 and the first law of thermodynamics:

$$|Q_h| = |\Delta E_{\text{int}} - W_{AB}| = |0 - W_{AB}| = nRT_h \ln \frac{V_B}{V_A}$$

In a similar manner, find the energy transfer to the cold reservoir during the isothermal compression $C \rightarrow D$:

$$|Q_c| = |\Delta E_{\text{int}} - W_{CD}| = |0 - W_{CD}| = nRT_c \ln \frac{V_C}{V_D}$$

Divide the second expression by the first:

$$(1) \quad \frac{|Q_c|}{|Q_h|} = \frac{T_c \ln(V_C/V_D)}{T_h \ln(V_B/V_A)}$$

Apply Equation 21.39 to the adiabatic processes $B \rightarrow C$ and $D \rightarrow A$:

$$T_h V_B^{\gamma-1} = T_c V_C^{\gamma-1}$$

$$T_h V_A^{\gamma-1} = T_c V_D^{\gamma-1}$$

Divide the first equation by the second:

$$\left(\frac{V_B}{V_A}\right)^{\gamma-1} = \left(\frac{V_C}{V_D}\right)^{\gamma-1}$$

$$(2) \quad \frac{V_B}{V_A} = \frac{V_C}{V_D}$$

Substitute Equation (2) into Equation (1):

$$\frac{|Q_c|}{|Q_h|} = \frac{T_c \ln(V_C/V_D)}{T_h \ln(V_B/V_A)} = \frac{T_c \ln(V_C/V_D)}{T_h \ln(V_C/V_D)} = \frac{T_c}{T_h}$$

Finalize This last equation is Equation 22.7, the one we set out to prove.

Example 22.4 The Steam Engine

A steam engine has a boiler that operates at 500 K. The energy from the burning fuel changes water to steam, and this steam then drives a piston. The cold reservoir's temperature is that of the outside air, approximately 300 K. What is the maximum thermal efficiency of this steam engine?

SOLUTION

Conceptualize In a steam engine, the gas pushing on the piston in Figure 22.10 is steam. A real steam engine does not operate in a Carnot cycle, but, to find the maximum possible efficiency, imagine a Carnot steam engine.

Categorize We calculate an efficiency using Equation 22.8, so we categorize this example as a substitution problem.

Substitute the reservoir temperatures into Equation 22.8:

$$e_C = 1 - \frac{T_c}{T_h} = 1 - \frac{300 \text{ K}}{500 \text{ K}} = 0.400 \quad \text{or} \quad 40.0\%$$

This result is the highest *theoretical* efficiency of the engine. In practice, the efficiency is considerably lower.

▶ 22.4 continued

WHAT IF? Suppose we wished to increase the theoretical efficiency of this engine. This increase can be achieved by raising T_h by ΔT or by decreasing T_c by the same ΔT . Which would be more effective?

Answer A given ΔT would have a larger fractional effect on a smaller temperature, so you would expect a larger change in efficiency if you alter T_c by ΔT . Let's test that numerically. Raising T_h by 50 K, corresponding to $T_h = 550$ K, would give a maximum efficiency of

$$e_C = 1 - \frac{T_c}{T_h} = 1 - \frac{300 \text{ K}}{550 \text{ K}} = 0.455$$

Decreasing T_c by 50 K, corresponding to $T_c = 250$ K, would give a maximum efficiency of

$$e_C = 1 - \frac{T_c}{T_h} = 1 - \frac{250 \text{ K}}{500 \text{ K}} = 0.500$$

Although changing T_c is *mathematically* more effective, often changing T_h is *practically* more feasible.

22.5 Gasoline and Diesel Engines

In a gasoline engine, six processes occur in each cycle; they are illustrated in Figure 22.12. In this discussion, let's consider the interior of the cylinder above the piston to be the system that is taken through repeated cycles in the engine's operation. For a given cycle, the piston moves up and down twice, which represents a four-stroke cycle consisting of two upstrokes and two downstrokes. The processes in the cycle can be approximated by the **Otto cycle** shown in the PV diagram in Figure 22.13 (page 666). In the following discussion, refer to Figure 22.12 for the pictorial representation of the strokes and Figure 22.13 for the significance on the PV diagram of the letter designations below:

1. During the *intake stroke* (Fig. 22.12a and $O \rightarrow A$ in Figure 22.13), the piston moves downward and a gaseous mixture of air and fuel is drawn into the

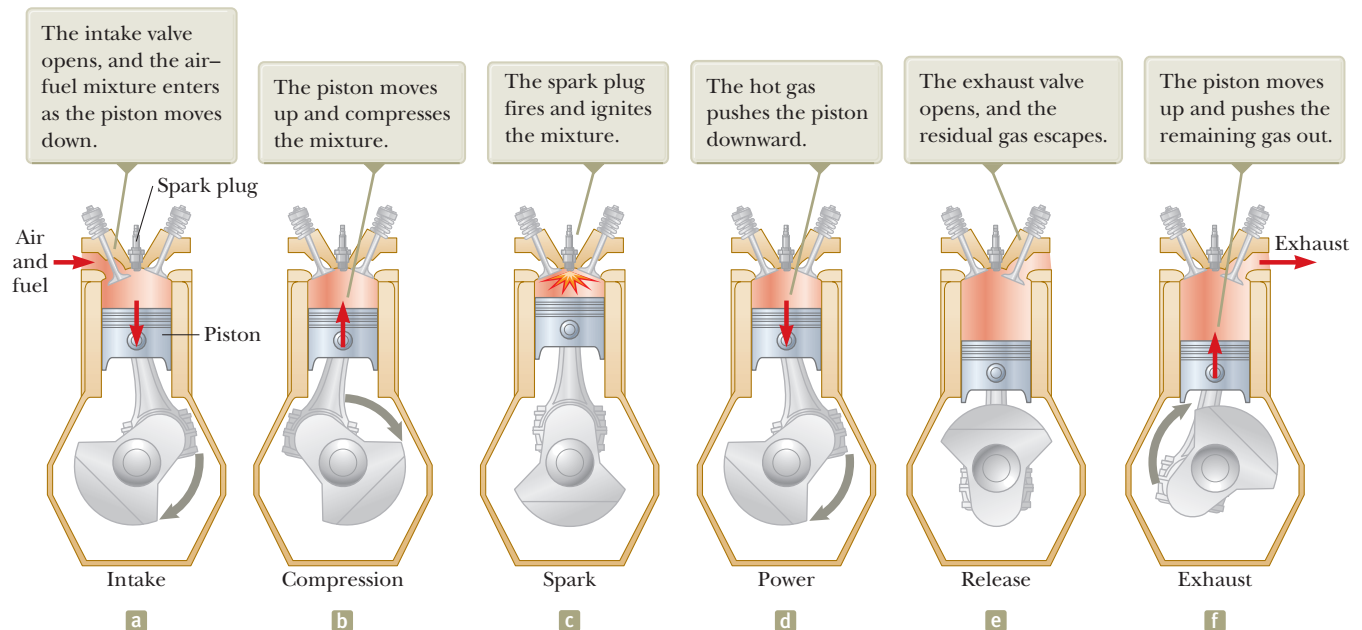


Figure 22.12 The four-stroke cycle of a conventional gasoline engine. The arrows on the piston indicate the direction of its motion during each process.

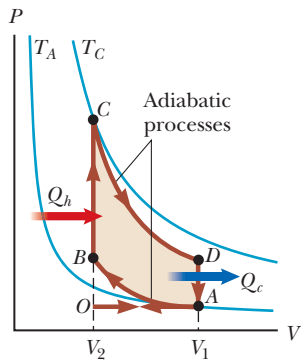


Figure 22.13 PV diagram for the Otto cycle, which approximately represents the processes occurring in an internal combustion engine.

cylinder at atmospheric pressure. That is the energy input part of the cycle: energy enters the system (the interior of the cylinder) by matter transfer as potential energy stored in the fuel. In this process, the volume increases from V_2 to V_1 . This apparent backward numbering is based on the compression stroke (process 2 below), in which the air–fuel mixture is compressed from V_1 to V_2 .

2. During the *compression stroke* (Fig. 22.12b and $A \rightarrow B$ in Fig. 22.13), the piston moves upward, the air–fuel mixture is compressed adiabatically from volume V_1 to volume V_2 , and the temperature increases from T_A to T_B . The work done on the gas is positive, and its value is equal to the negative of the area under the curve AB in Figure 22.13.
3. Combustion occurs when the spark plug fires (Fig. 22.12c and $B \rightarrow C$ in Fig. 22.13). That is not one of the strokes of the cycle because it occurs in a very short time interval while the piston is at its highest position. The combustion represents a rapid energy transformation from potential energy stored in chemical bonds in the fuel to internal energy associated with molecular motion, which is related to temperature. During this time interval, the mixture’s pressure and temperature increase rapidly, with the temperature rising from T_B to T_C . The volume, however, remains approximately constant because of the short time interval. As a result, approximately no work is done on or by the gas. We can model this process in the PV diagram (Fig. 22.13) as that process in which the energy $|Q_h|$ enters the system. (In reality, however, this process is a *transformation* of energy already in the cylinder from process $O \rightarrow A$.)
4. In the *power stroke* (Fig. 22.12d and $C \rightarrow D$ in Fig. 22.13), the gas expands adiabatically from V_2 to V_1 . This expansion causes the temperature to drop from T_C to T_D . Work is done by the gas in pushing the piston downward, and the value of this work is equal to the area under the curve CD .
5. Release of the residual gases occurs when an exhaust valve is opened (Fig. 22.12e and $D \rightarrow A$ in Fig. 22.13). The pressure suddenly drops for a short time interval. During this time interval, the piston is almost stationary and the volume is approximately constant. Energy is expelled from the interior of the cylinder and continues to be expelled during the next process.
6. In the final process, the *exhaust stroke* (Fig. 22.12e and $A \rightarrow O$ in Fig. 22.13), the piston moves upward while the exhaust valve remains open. Residual gases are exhausted at atmospheric pressure, and the volume decreases from V_1 to V_2 . The cycle then repeats.

If the air–fuel mixture is assumed to be an ideal gas, the efficiency of the Otto cycle is

$$e = 1 - \frac{1}{(V_1/V_2)^{\gamma-1}} \quad (\text{Otto cycle}) \quad (22.9)$$

where V_1/V_2 is the **compression ratio** and γ is the ratio of the molar specific heats C_p/C_v for the air–fuel mixture. Equation 22.9, which is derived in Example 22.5, shows that the efficiency increases as the compression ratio increases. For a typical compression ratio of 8 and with $\gamma = 1.4$, Equation 22.9 predicts a theoretical efficiency of 56% for an engine operating in the idealized Otto cycle. This value is much greater than that achieved in real engines (15% to 20%) because of such effects as friction, energy transfer by conduction through the cylinder walls, and incomplete combustion of the air–fuel mixture.

Diesel engines operate on a cycle similar to the Otto cycle, but they do not employ a spark plug. The compression ratio for a diesel engine is much greater than that for a gasoline engine. Air in the cylinder is compressed to a very small volume, and, as a consequence, the cylinder temperature at the end of the compression stroke is

very high. At this point, fuel is injected into the cylinder. The temperature is high enough for the air–fuel mixture to ignite without the assistance of a spark plug. Diesel engines are more efficient than gasoline engines because of their greater compression ratios and resulting higher combustion temperatures.

Example 22.5 Efficiency of the Otto Cycle

Show that the thermal efficiency of an engine operating in an idealized Otto cycle (see Figs. 22.12 and 22.13) is given by Equation 22.9. Treat the working substance as an ideal gas.

SOLUTION

Conceptualize Study Figures 22.12 and 22.13 to make sure you understand the working of the Otto cycle.

Categorize As seen in Figure 22.13, we categorize the processes in the Otto cycle as isovolumetric and adiabatic.

Analyze Model the energy input and output as occurring by heat in processes $B \rightarrow C$ and $D \rightarrow A$. (In reality, most of the energy enters and leaves by matter transfer as the air–fuel mixture enters and leaves the cylinder.) Use Equation 21.23 to find the energy transfers by heat for these processes, which take place at constant volume:

$$B \rightarrow C \quad |Q_h| = nC_V(T_C - T_B)$$

$$D \rightarrow A \quad |Q_c| = nC_V(T_D - T_A)$$

Substitute these expressions into Equation 22.2:

$$(1) \quad e = 1 - \frac{|Q_c|}{|Q_h|} = 1 - \frac{T_D - T_A}{T_C - T_B}$$

Apply Equation 21.39 to the adiabatic processes $A \rightarrow B$ and $C \rightarrow D$:

$$A \rightarrow B \quad T_A V_A^{\gamma-1} = T_B V_B^{\gamma-1}$$

$$C \rightarrow D \quad T_C V_C^{\gamma-1} = T_D V_D^{\gamma-1}$$

Solve these equations for the temperatures T_A and T_D , noting that $V_A = V_D = V_1$ and $V_B = V_C = V_2$:

$$(2) \quad T_A = T_B \left(\frac{V_B}{V_A} \right)^{\gamma-1} = T_B \left(\frac{V_2}{V_1} \right)^{\gamma-1}$$

$$(3) \quad T_D = T_C \left(\frac{V_C}{V_D} \right)^{\gamma-1} = T_C \left(\frac{V_2}{V_1} \right)^{\gamma-1}$$

Subtract Equation (2) from Equation (3) and rearrange:

$$(4) \quad \frac{T_D - T_A}{T_C - T_B} = \left(\frac{V_2}{V_1} \right)^{\gamma-1}$$

Substitute Equation (4) into Equation (1):

$$e = 1 - \frac{1}{(V_1/V_2)^{\gamma-1}}$$

Finalize This final expression is Equation 22.9.

22.6 Entropy

The zeroth law of thermodynamics involves the concept of temperature, and the first law involves the concept of internal energy. Temperature and internal energy are both state variables; that is, the value of each depends only on the thermodynamic state of a system, not on the process that brought it to that state. Another state variable—this one related to the second law of thermodynamics—is *entropy*.

Entropy was originally formulated as a useful concept in thermodynamics. Its importance grew, however, as the field of statistical mechanics developed because the analytical techniques of statistical mechanics provide an alternative means of interpreting entropy and a more global significance to the concept. In statistical

Pitfall Prevention 22.4

Entropy Is Abstract Entropy is one of the most abstract notions in physics, so follow the discussion in this and the subsequent sections very carefully. Do not confuse energy with entropy. Even though the names sound similar, they are very different concepts. On the other hand, energy and entropy are intimately related, as we shall see in this discussion.

mechanics, the behavior of a substance is described in terms of the statistical behavior of its atoms and molecules.

We will develop our understanding of entropy by first considering some non-thermodynamic systems, such as a pair of dice and poker hands. We will then expand on these ideas and use them to understand the concept of entropy as applied to thermodynamic systems.

We begin this process by distinguishing between *microstates* and *macrostates* of a system. A **microstate** is a particular configuration of the individual constituents of the system. A **macrostate** is a description of the system's conditions from a macroscopic point of view.

For any given macrostate of the system, a number of microstates are possible. For example, the macrostate of a 4 on a pair of dice can be formed from the possible microstates 1–3, 2–2, and 3–1. The macrostate of 2 has only one microstate, 1–1. It is assumed all microstates are equally probable. We can compare these two macrostates in three ways: (1) *Uncertainty*: If we know that a macrostate of 4 exists, there is some uncertainty as to the microstate that exists, because there are multiple microstates that will result in a 4. In comparison, there is lower uncertainty (in fact, *zero* uncertainty) for a macrostate of 2 because there is only one microstate. (2) *Choice*: There are more choices of microstates for a 4 than for a 2. (3) *Probability*: The macrostate of 4 has a higher probability than a macrostate of 2 because there are more ways (microstates) of achieving a 4. The notions of uncertainty, choice, and probability are central to the concept of entropy, as we discuss below.

Let's look at another example related to a poker hand. There is only one microstate associated with the macrostate of a royal flush of five spades, laid out in order from ten to ace (Fig. 22.14a). Figure 22.14b shows another poker hand. The macrostate here is “worthless hand.” The *particular* hand (the microstate) in Figure 22.14b and the hand in Figure 22.14a are equally probable. There are, however, *many* other hands similar to that in Figure 22.14b; that is, there are many microstates that also qualify as worthless hands. If you, as a poker player, are told your opponent holds a macrostate of a royal flush in spades, there is *zero uncertainty* as to what five cards are in the hand, only *one choice* of what those cards are, and *low probability* that the hand actually occurred. In contrast, if you are told that your opponent has the macrostate of “worthless hand,” there is *high uncertainty* as to what the five cards are, *many choices* of what they could be, and a *high probability* that a worthless hand occurred. Another variable in poker, of course, is the value of the hand, related to the probability: the higher the probability, the lower the value. The important point to take away from this discussion is that uncertainty, choice, and probability are related in these situations: if one is high, the others are high, and vice versa.

Another way of describing macrostates is by means of “missing information.” For high-probability macrostates with many microstates, there is a large amount




Figure 22.14 (a) A royal flush has low probability of occurring. (b) A worthless poker hand, one of many.

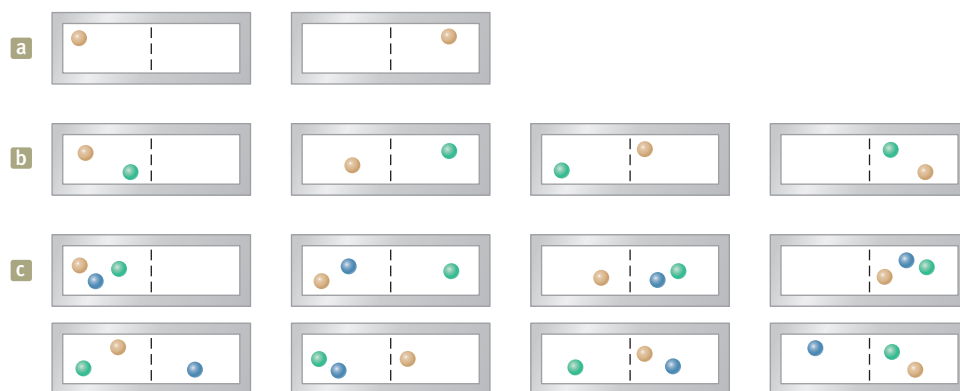
of missing information, meaning we have very little information about what microstate actually exists. For a macrostate of a 2 on a pair of dice, we have no missing information; we *know* the microstate is 1–1. For a macrostate of a worthless poker hand, however, we have lots of missing information, related to the large number of choices we could make as to the actual hand that is held.

Quick Quiz 22.4 (a) Suppose you select four cards at random from a standard deck of playing cards and end up with a macrostate of four deuces. How many microstates are associated with this macrostate? (b) Suppose you pick up two cards and end up with a macrostate of two aces. How many microstates are associated with this macrostate?

For thermodynamic systems, the variable **entropy** S is used to represent the level of uncertainty, choice, probability, or missing information in the system. Consider a configuration (a macrostate) in which all the oxygen molecules in your room are located in the west half of the room and the nitrogen molecules in the east half. Compare that macrostate to the more common configuration of the air molecules distributed uniformly throughout the room. The latter configuration has the higher uncertainty and more missing information as to where the molecules are located because they could be anywhere, not just in one half of the room according to the type of molecule. The configuration with a uniform distribution also represents more choices as to where to locate molecules. It also has a much higher probability of occurring; have you ever noticed your half of the room suddenly being empty of oxygen? Therefore, the latter configuration represents a higher entropy.

For systems of dice and poker hands, the comparisons between probabilities for various macrostates involve relatively small numbers. For example, a macrostate of a 4 on a pair of dice is only three times as probable as a macrostate of 2. The ratio of probabilities of a worthless hand and a royal flush is significantly larger. When we are talking about a macroscopic thermodynamic system containing on the order of Avogadro's number of molecules, however, the ratios of probabilities can be astronomical.

Let's explore this concept by considering 100 molecules in a container. Half of the molecules are oxygen and the other half are nitrogen. At any given moment, the probability of one molecule being in the left part of the container shown in Figure 22.15a as a result of random motion is $\frac{1}{2}$. If there are two molecules as shown in Figure 22.15b, the probability of both being in the left part is $(\frac{1}{2})^2$, or 1 in 4. If there are three molecules (Fig. 22.15c), the probability of them all being in the left portion at the same moment is $(\frac{1}{2})^3$, or 1 in 8. For 100 independently moving molecules, the probability that the 50 oxygen molecules will be found in the left part at any moment is $(\frac{1}{2})^{50}$. Likewise, the probability that the remaining 50 nitrogen molecules will be found in the right part at any moment is $(\frac{1}{2})^{50}$. Therefore, the probability of



Pitfall Prevention 22.5

Entropy Is for Thermodynamic Systems We are not applying the word *entropy* to describe systems of dice or cards. We are only discussing dice and cards to set up the notions of microstates, macrostates, uncertainty, choice, probability, and missing information. Entropy can *only* be used to describe thermodynamic systems that contain many particles, allowing the system to store energy as internal energy.

Pitfall Prevention 22.6

Entropy and Disorder Some textbook treatments of entropy relate entropy to the *disorder* of a system. While this approach has some merit, it is not entirely successful. For example, consider two samples of the same solid material at the same temperature. One sample has volume V and the other volume $2V$. The larger sample has higher entropy than the smaller one simply because there are more molecules in it. But there is no sense in which it is more disordered than the smaller sample. We will not use the disorder approach in this text, but watch for it in other sources.

Figure 22.15 Possible distributions of identical molecules in a container. The colors used here exist only to allow us to distinguish among the molecules. (a) One molecule in a container has a 1-in-2 chance of being on the left side. (b) Two molecules have a 1-in-4 chance of being on the left side at the same time. (c) Three molecules have a 1-in-8 chance of being on the left side at the same time.

finding this oxygen–nitrogen separation as a result of random motion is the product $(\frac{1}{2})^{50}(\frac{1}{2})^{50} = (\frac{1}{2})^{100}$, which corresponds to about 1 in 10^{30} . When this calculation is extrapolated from 100 molecules to the number in 1 mol of gas (6.02×10^{23}), the separated arrangement is found to be *extremely* improbable!

Conceptual Example 22.6 Let's Play Marbles!

Suppose you have a bag of 100 marbles of which 50 are red and 50 are green. You are allowed to draw four marbles from the bag according to the following rules. Draw one marble, record its color, and return it to the bag. Shake the bag and then draw another marble. Continue this process until you have drawn and returned four marbles. What are the possible macrostates for this set of events? What is the most likely macrostate? What is the least likely macrostate?

SOLUTION

Because each marble is returned to the bag before the next one is drawn and the bag is then shaken, the probability of drawing a red marble is always the same as the probability of drawing a green one. All the possible microstates and macrostates are shown in Table 22.1. As this table indicates, there is only one way

to draw a macrostate of four red marbles, so there is only one microstate for that macrostate. There are, however, four possible microstates that correspond to the macrostate of one green marble and three red marbles, six microstates that correspond to two green marbles and two red marbles, four microstates that correspond to three green marbles and one red marble, and one microstate that corresponds to four green marbles. The most likely macrostate—two red marbles and two green marbles—corresponds to the largest number of choices of microstates, and, therefore, the most uncertainty as to what the exact microstate is. The least likely macrostates—four red marbles or four green marbles—correspond to only one choice of microstate and, therefore, zero uncertainty. There is no missing information for the least likely states: we know the colors of all four marbles.

Table 22.1 Possible Results of Drawing Four Marbles from a Bag

Macrostate	Possible Microstates	Total Number of Microstates
All R	RRRR	1
1G, 3R	RRRG, RRGR, RGRR, GRRR	4
2G, 2R	RRGG, RGRG, GRRG, RGGR, GRGR, GGRR	6
3G, 1R	GGGR, GGRG, GRGG, RGGG	4
All G	GGGG	1

We have investigated the notions of uncertainty, number of choices, probability, and missing information for some non-thermodynamic systems and have argued that the concept of entropy can be related to these notions for thermodynamic systems. We have not yet indicated how to evaluate entropy numerically for a thermodynamic system. This evaluation was done through statistical means by Boltzmann in the 1870s and appears in its currently accepted form as

$$S = k_B \ln W \quad (22.10)$$

where k_B is Boltzmann's constant. Boltzmann intended W , standing for *Wahrscheinlichkeit*, the German word for probability, to be proportional to the probability that a given macrostate exists. It is equivalent to let W be the number of microstates associated with the macrostate, so we can interpret W as representing the number of "ways" of achieving the macrostate. Therefore, macrostates with larger numbers of microstates have higher probability and, equivalently, higher entropy.

In the kinetic theory of gases, gas molecules are represented as particles moving randomly. Suppose the gas is confined to a volume V . For a uniform distribution of gas in the volume, there are a large number of equivalent microstates, and the entropy of the gas can be related to the number of microstates corresponding to a given macrostate. Let us count the number of microstates by considering the

variety of molecular locations available to the molecules. Let us assume each molecule occupies some microscopic volume V_m . The total number of possible locations of a single molecule in a macroscopic volume V is the ratio $w = V/V_m$, which is a huge number. We use lowercase w here to represent the number of ways a single molecule can be placed in the volume or the number of microstates for a single molecule, which is equivalent to the number of available locations. We assume the probabilities of a molecule occupying any of these locations are equal. As more molecules are added to the system, the number of possible ways the molecules can be positioned in the volume multiplies, as we saw in Figure 22.15. For example, if you consider two molecules, for every possible placement of the first, all possible placements of the second are available. Therefore, there are w ways of locating the first molecule, and for each way, there are w ways of locating the second molecule. The total number of ways of locating the two molecules is $W = w \times w = w^2 = (V/V_m)^2$. (Uppercase W represents the number of ways of putting multiple molecules into the volume and is not to be confused with work.)

Now consider placing N molecules of gas in the volume V . Neglecting the very small probability of having two molecules occupy the same location, each molecule may go into any of the V/V_m locations, and so the number of ways of locating N molecules in the volume becomes $W = w^N = (V/V_m)^N$. Therefore, the spatial part of the entropy of the gas, from Equation 22.10, is

$$S = k_B \ln W = k_B \ln \left(\frac{V}{V_m} \right)^N = Nk_B \ln \left(\frac{V}{V_m} \right) = nR \ln \left(\frac{V}{V_m} \right) \quad (22.11)$$

We will use this expression in the next section as we investigate changes in entropy for processes occurring in thermodynamic systems.

Notice that we have indicated Equation 22.11 as representing only the *spatial* portion of the entropy of the gas. There is also a temperature-dependent portion of the entropy that the discussion above does not address. For example, imagine an isovolumetric process in which the temperature of the gas increases. Equation 22.11 above shows no change in the spatial portion of the entropy for this situation. There is a change in entropy, however, associated with the increase in temperature. We can understand this by appealing again to a bit of quantum physics. Recall from Section 21.3 that the energies of the gas molecules are quantized. When the temperature of a gas changes, the distribution of energies of the gas molecules changes according to the Boltzmann distribution law, discussed in Section 21.5. Therefore, as the temperature of the gas increases, there is more uncertainty about the particular microstate that exists as gas molecules distribute themselves into higher available quantum states. We will see the entropy change associated with an isovolumetric process in Example 22.8.

22.7 Changes in Entropy for Thermodynamic Systems

Thermodynamic systems are constantly in flux, changing continuously from one microstate to another. If the system is in equilibrium, a given macrostate exists, and the system fluctuates from one microstate associated with that macrostate to another. This change is unobservable because we are only able to detect the macrostate. Equilibrium states have tremendously higher probability than nonequilibrium states, so it is highly unlikely that an equilibrium state will spontaneously change to a nonequilibrium state. For example, we do not observe a spontaneous split into the oxygen–nitrogen separation discussed in Section 22.6.

What if the system begins in a low-probability macrostate, however? What if the room *begins* with an oxygen–nitrogen separation? In this case, the system will progress from this low-probability macrostate to the much-higher probability

state: the gases will disperse and mix throughout the room. Because entropy is related to probability, a spontaneous increase in entropy, such as in the latter situation, is natural. If the oxygen and nitrogen molecules were initially spread evenly throughout the room, a decrease in entropy would occur if the spontaneous splitting of molecules occurred.

One way of conceptualizing a change in entropy is to relate it to *energy spreading*. A natural tendency is for energy to undergo spatial spreading in time, representing an increase in entropy. If a basketball is dropped onto a floor, it bounces several times and eventually comes to rest. The initial gravitational potential energy in the basketball–Earth system has been transformed to internal energy in the ball and the floor. That energy is spreading outward by heat into the air and into regions of the floor farther from the drop point. In addition, some of the energy has spread throughout the room by sound. It would be unnatural for energy in the room and floor to reverse this motion and concentrate into the stationary ball so that it spontaneously begins to bounce again.

In the adiabatic free expansion of Section 22.3, the spreading of energy accompanies the spreading of the molecules as the gas rushes into the evacuated half of the container. If a warm object is placed in thermal contact with a cool object, energy transfers from the warm object to the cool one by heat, representing a spread of energy until it is distributed more evenly between the two objects.

Now consider a mathematical representation of this spreading of energy or, equivalently, the change in entropy. The original formulation of entropy in thermodynamics involves the transfer of energy by heat during a reversible process. Consider any infinitesimal process in which a system changes from one equilibrium state to another. If dQ_r is the amount of energy transferred by heat when the system follows a reversible path between the states, the change in entropy dS is equal to this amount of energy divided by the absolute temperature of the system:

Change in entropy for
an infinitesimal process

$$dS = \frac{dQ_r}{T} \quad (22.12)$$

We have assumed the temperature is constant because the process is infinitesimal. Because entropy is a state variable, the change in entropy during a process depends only on the endpoints and therefore is independent of the actual path followed. Consequently, the entropy change for an irreversible process can be determined by calculating the entropy change for a *reversible* process that connects the same initial and final states.

The subscript r on the quantity dQ_r is a reminder that the transferred energy is to be measured along a reversible path even though the system may actually have followed some irreversible path. When energy is absorbed by the system, dQ_r is positive and the entropy of the system increases. When energy is expelled by the system, dQ_r is negative and the entropy of the system decreases. Notice that Equation 22.12 does not define entropy but rather the *change* in entropy. Hence, the meaningful quantity in describing a process is the *change* in entropy.

To calculate the change in entropy for a *finite* process, first recognize that T is generally not constant during the process. Therefore, we must integrate Equation 22.12:

Change in entropy for
a finite process

$$\Delta S = \int_i^f dS = \int_i^f \frac{dQ_r}{T} \quad (22.13)$$

As with an infinitesimal process, the change in entropy ΔS of a system going from one state to another has the same value for *all* paths connecting the two states. That is, the finite change in entropy ΔS of a system depends only on the properties of the initial and final equilibrium states. Therefore, we are free to choose any convenient reversible path over which to evaluate the entropy in place of the actual path as long as the initial and final states are the same for both paths. This point is explored further on in this section.

From Equation 22.10, we see that a change in entropy is represented in the Boltzmann formulation as

$$\Delta S = k_B \ln \left(\frac{W_f}{W_i} \right) \quad (22.14)$$

where W_i and W_f represent the initial and final numbers of microstates, respectively, for the initial and final configurations of the system. If $W_f > W_i$, the final state is more probable than the initial state (there are more choices of microstates), and the entropy increases.

Quick Quiz 22.5 An ideal gas is taken from an initial temperature T_i to a higher final temperature T_f along two different reversible paths. Path A is at constant pressure, and path B is at constant volume. What is the relation between the entropy changes of the gas for these paths? (a) $\Delta S_A > \Delta S_B$ (b) $\Delta S_A = \Delta S_B$ (c) $\Delta S_A < \Delta S_B$

Quick Quiz 22.6 True or False: The entropy change in an adiabatic process must be zero because $Q = 0$.

Example 22.7 Change in Entropy: Melting

A solid that has a latent heat of fusion L_f melts at a temperature T_m . Calculate the change in entropy of this substance when a mass m of the substance melts.

SOLUTION

Conceptualize We can choose any convenient reversible path to follow that connects the initial and final states. It is not necessary to identify the process or the path because, whatever it is, the effect is the same: energy enters the substance by heat and the substance melts. The mass m of the substance that melts is equal to Δm , the change in mass of the higher-phase (liquid) substance.

Categorize Because the melting takes place at a fixed temperature, we categorize the process as isothermal.

Analyze Use Equation 20.7 in Equation 22.13, noting that the temperature remains fixed:

$$\Delta S = \int \frac{dQ_r}{T} = \frac{1}{T_m} \int dQ_r = \frac{Q_r}{T_m} = \frac{L_f \Delta m}{T_m} = \frac{L_f m}{T_m}$$

Finalize Notice that Δm is positive so that ΔS is positive, representing that energy is added to the substance.

Entropy Change in a Carnot Cycle

Let's consider the changes in entropy that occur in a Carnot heat engine that operates between the temperatures T_c and T_h . In one cycle, the engine takes in energy $|Q_h|$ from the hot reservoir and expels energy $|Q_c|$ to the cold reservoir. These energy transfers occur only during the isothermal portions of the Carnot cycle; therefore, the constant temperature can be brought out in front of the integral sign in Equation 22.13. The integral then simply has the value of the total amount of energy transferred by heat. Therefore, the total change in entropy for one cycle is

$$\Delta S = \frac{|Q_h|}{T_h} - \frac{|Q_c|}{T_c} \quad (22.15)$$

where the minus sign represents that energy is leaving the engine at temperature T_c . In Example 22.3, we showed that for a Carnot engine,

$$\frac{|Q_c|}{|Q_h|} = \frac{T_c}{T_h}$$

Using this result in Equation 22.15, we find that the total change in entropy for a Carnot engine operating in a cycle is *zero*:

$$\Delta S = 0$$

Now consider a system taken through an arbitrary (non-Carnot) reversible cycle. Because entropy is a state variable—and hence depends only on the properties of a given equilibrium state—we conclude that $\Delta S = 0$ for *any* reversible cycle. In general, we can write this condition as

$$\oint \frac{dQ_r}{T} = 0 \quad (\text{reversible cycle}) \quad (22.16)$$

where the symbol \oint indicates that the integration is over a closed path.

Entropy Change in a Free Expansion

Let's again consider the adiabatic free expansion of a gas occupying an initial volume V_i (Fig. 22.16). In this situation, a membrane separating the gas from an evacuated region is broken and the gas expands to a volume V_f . This process is irreversible; the gas would not spontaneously crowd into half the volume after filling the entire volume. What is the change in entropy of the gas during this process? The process is neither reversible nor quasi-static. As shown in Section 20.6, the initial and final temperatures of the gas are the same.

To apply Equation 22.13, we cannot take $Q = 0$, the value for the irreversible process, but must instead find Q_r ; that is, we must find an equivalent reversible path that shares the same initial and final states. A simple choice is an isothermal, reversible expansion in which the gas pushes slowly against a piston while energy enters the gas by heat from a reservoir to hold the temperature constant. Because T is constant in this process, Equation 22.13 gives

$$\Delta S = \int_i^f \frac{dQ_r}{T} = \frac{1}{T} \int_i^f dQ_r$$

For an isothermal process, the first law of thermodynamics specifies that $\int_i^f dQ_r$ is equal to the negative of the work done on the gas during the expansion from V_i to V_f , which is given by Equation 20.14. Using this result, we find that the entropy change for the gas is

$$\Delta S = nR \ln \left(\frac{V_f}{V_i} \right) \quad (22.17)$$

Because $V_f > V_i$, we conclude that ΔS is positive. This positive result indicates that the entropy of the gas *increases* as a result of the irreversible, adiabatic expansion.

It is easy to see that the energy has spread after the expansion. Instead of being concentrated in a relatively small space, the molecules and the energy associated with them are scattered over a larger region.

Entropy Change in Thermal Conduction

Let us now consider a system consisting of a hot reservoir and a cold reservoir that are in thermal contact with each other and isolated from the rest of the Universe. A process occurs during which energy Q is transferred by heat from the hot reservoir at temperature T_h to the cold reservoir at temperature T_c . The process as described is irreversible (energy would not spontaneously flow from cold to hot), so we must find an equivalent reversible process. The overall process is a combination of two processes: energy leaving the hot reservoir and energy entering the cold reservoir. We will calculate the entropy change for the reservoir in each process and add to obtain the overall entropy change.

When the membrane is ruptured, the gas will expand freely and irreversibly into the full volume.

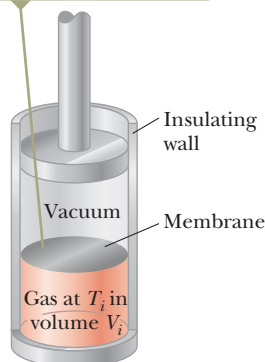


Figure 22.16 Adiabatic free expansion of a gas. The container is thermally insulated from its surroundings; therefore, $Q = 0$.

Consider first the process of energy entering the cold reservoir. Although the reservoir has absorbed some energy, the temperature of the reservoir has not changed. The energy that has entered the reservoir is the same as that which would enter by means of a reversible, isothermal process. The same is true for energy leaving the hot reservoir.

Because the cold reservoir absorbs energy Q , its entropy increases by Q/T_c . At the same time, the hot reservoir loses energy Q , so its entropy change is $-Q/T_h$. Therefore, the change in entropy of the system is

$$\Delta S = \frac{Q}{T_c} + \frac{-Q}{T_h} = Q \left(\frac{1}{T_c} - \frac{1}{T_h} \right) > 0 \quad (22.18)$$

This increase is consistent with our interpretation of entropy changes as representing the spreading of energy. In the initial configuration, the hot reservoir has excess internal energy relative to the cold reservoir. The process that occurs spreads the energy into a more equitable distribution between the two reservoirs.

Example 22.8 Adiabatic Free Expansion: Revisited

Let's verify that the macroscopic and microscopic approaches to the calculation of entropy lead to the same conclusion for the adiabatic free expansion of an ideal gas. Suppose the ideal gas in Figure 22.16 expands to four times its initial volume. As we have seen for this process, the initial and final temperatures are the same.

(A) Using a macroscopic approach, calculate the entropy change for the gas.

SOLUTION

Conceptualize Look back at Figure 22.16, which is a diagram of the system before the adiabatic free expansion. Imagine breaking the membrane so that the gas moves into the evacuated area. The expansion is irreversible.

Categorize We can replace the irreversible process with a reversible isothermal process between the same initial and final states. This approach is macroscopic, so we use a thermodynamic variable, in particular, the volume V .

Analyze Use Equation 22.17 to evaluate the entropy change:

$$\Delta S = nR \ln \left(\frac{V_f}{V_i} \right) = nR \ln \left(\frac{4V_i}{V_i} \right) = nR \ln 4$$

(B) Using statistical considerations, calculate the change in entropy for the gas and show that it agrees with the answer you obtained in part (A).

SOLUTION

Categorize This approach is microscopic, so we use variables related to the individual molecules.

Analyze As in the discussion leading to Equation 22.11, the number of microstates available to a single molecule in the initial volume V_i is $w_i = V_i/V_m$, where V_i is the initial volume of the gas and V_m is the microscopic volume occupied by the molecule. Use this number to find the number of available microstates for N molecules:

$$W_i = w_i^N = \left(\frac{V_i}{V_m} \right)^N$$

Find the number of available microstates for N molecules in the final volume $V_f = 4V_i$:

$$W_f = \left(\frac{V_f}{V_m} \right)^N = \left(\frac{4V_i}{V_m} \right)^N$$

continued

22.8 continued

Use Equation 22.14 to find the entropy change:

$$\begin{aligned}\Delta S &= k_B \ln \left(\frac{W_f}{W_i} \right) \\ &= k_B \ln \left(\frac{4V_i}{V_i} \right)^N = k_B \ln (4^N) = Nk_B \ln 4 = nR \ln 4\end{aligned}$$

Finalize The answer is the same as that for part (A), which dealt with macroscopic parameters.

WHAT IF? In part (A), we used Equation 22.17, which was based on a reversible isothermal process connecting the initial and final states. Would you arrive at the same result if you chose a different reversible process?

Answer You *must* arrive at the same result because entropy is a state variable. For example, consider the two-step process in Figure 22.17: a reversible adiabatic expansion from V_i to $4V_i$ ($A \rightarrow B$) during which the temperature drops from T_1 to T_2 and a reversible isovolumetric process ($B \rightarrow C$) that takes the gas back to the initial temperature T_1 . During the reversible adiabatic process, $\Delta S = 0$ because $Q_r = 0$.

For the reversible isovolumetric process ($B \rightarrow C$), use Equation 22.13:

Find the ratio of temperature T_1 to T_2 from Equation 21.39 for the adiabatic process:

Substitute to find ΔS :

We do indeed obtain the exact same result for the entropy change.

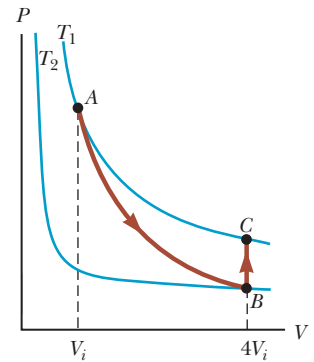


Figure 22.17 (Example 22.8) A gas expands to four times its initial volume and back to the initial temperature by means of a two-step process.

$$\Delta S = \int_i^f \frac{dQ_r}{T} = \int_{T_2}^{T_1} \frac{nC_V dT}{T} = nC_V \ln \left(\frac{T_1}{T_2} \right)$$

$$\frac{T_1}{T_2} = \left(\frac{4V_i}{V_i} \right)^{\gamma-1} = (4)^{\gamma-1}$$

$$\begin{aligned}\Delta S &= nC_V \ln (4)^{\gamma-1} = nC_V(\gamma - 1) \ln 4 \\ &= nC_V \left(\frac{C_P}{C_V} - 1 \right) \ln 4 = n(C_P - C_V) \ln 4 = nR \ln 4\end{aligned}$$

22.8 Entropy and the Second Law

If we consider a system and its surroundings to include the entire Universe, the Universe is always moving toward a higher-probability macrostate, corresponding to the continuous spreading of energy. An alternative way of stating this behavior is as follows:

Entropy statement of the second law of thermodynamics

The entropy of the Universe increases in all real processes.

This statement is yet another wording of the second law of thermodynamics that can be shown to be equivalent to the Kelvin-Planck and Clausius statements.

Let us show this equivalence first for the Clausius statement. Looking at Figure 22.5, we see that, if the heat pump operates in this manner, energy is spontaneously flowing from the cold reservoir to the hot reservoir without an input of energy by work. As a result, the energy in the system is not spreading evenly between the two reservoirs, but is *concentrating* in the hot reservoir. Consequently, if the Clausius statement of the second law is not true, then the entropy statement is also not true, demonstrating their equivalence.

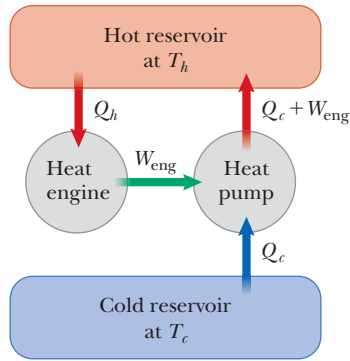


Figure 22.18 The impossible engine of Figure 22.3 transfers energy by work to a heat pump operating between two energy reservoirs. This situation is forbidden by the Clausius statement of the second law of thermodynamics.

For the equivalence of the Kelvin–Planck statement, consider Figure 22.18, which shows the impossible engine of Figure 22.3 connected to a heat pump operating between the same reservoirs. The output work of the engine is used to drive the heat pump. The net effect of this combination is that energy leaves the cold reservoir and is delivered to the hot reservoir without the input of work. (The work done by the engine on the heat pump is *internal* to the system of both devices.) This is forbidden by the Clausius statement of the second law, which we have shown to be equivalent to the entropy statement. Therefore, the Kelvin–Planck statement of the second law is also equivalent to the entropy statement.

When dealing with a system that is not isolated from its surroundings, remember that the increase in entropy described in the second law is that of the system *and* its surroundings. When a system and its surroundings interact in an irreversible process, the increase in entropy of one is greater than the decrease in entropy of the other. Hence, the change in entropy of the Universe must be greater than zero for an irreversible process and equal to zero for a reversible process.

We can check this statement of the second law for the calculations of entropy change that we made in Section 22.7. Consider first the entropy change in a free expansion, described by Equation 22.17. Because the free expansion takes place in an insulated container, no energy is transferred by heat from the surroundings. Therefore, Equation 22.17 represents the entropy change of the entire Universe. Because $V_f > V_i$, the entropy change of the Universe is positive, consistent with the second law.

Now consider the entropy change in thermal conduction, described by Equation 22.18. Let each reservoir be half the Universe. (The larger the reservoir, the better is the assumption that its temperature remains constant!) Then the entropy change of the Universe is represented by Equation 22.18. Because $T_h > T_c$, this entropy change is positive, again consistent with the second law. The positive entropy change is also consistent with the notion of energy spreading. The warm portion of the Universe has excess internal energy relative to the cool portion. Thermal conduction represents a spreading of the energy more equitably throughout the Universe.

Finally, let us look at the entropy change in a Carnot cycle, given by Equation 22.15. The entropy change of the engine itself is zero. The entropy change of the reservoirs is

$$\Delta S = \frac{|Q_c|}{T_c} - \frac{|Q_h|}{T_h}$$

In light of Equation 22.7, this entropy change is also zero. Therefore, the entropy change of the Universe is only that associated with the work done by the engine. A portion of that work will be used to change the mechanical energy of a system external to the engine: speed up the shaft of a machine, raise a weight, and so on. There is no change in internal energy of the external system due to this portion

of the work, or, equivalently, no energy spreading, so the entropy change is again zero. The other portion of the work will be used to overcome various friction forces or other nonconservative forces in the external system. This process will cause an increase in internal energy of that system. That same increase in internal energy could have happened via a reversible thermodynamic process in which energy Q_r is transferred by heat, so the entropy change associated with that part of the work is positive. As a result, the overall entropy change of the Universe for the operation of the Carnot engine is positive, again consistent with the second law.

Ultimately, because real processes are irreversible, the entropy of the Universe should increase steadily and eventually reach a maximum value. At this value, assuming that the second law of thermodynamics, as formulated here on Earth, applies to the entire expanding Universe, the Universe will be in a state of uniform temperature and density. The total energy of the Universe will have spread more evenly throughout the Universe. All physical, chemical, and biological processes will have ceased at this time. This gloomy state of affairs is sometimes referred to as the *heat death* of the Universe.

Summary

Definitions

The **thermal efficiency** e of a heat engine is

$$e \equiv \frac{W_{\text{eng}}}{|Q_h|} = \frac{|Q_h| - |Q_c|}{|Q_h|} = 1 - \frac{|Q_c|}{|Q_h|} \quad (22.2)$$

The **microstate** of a system is the description of its individual components. The **macrostate** is a description of the system from a macroscopic point of view. A given macrostate can have many microstates.

From a microscopic viewpoint, the **entropy** of a given macrostate is defined as

$$S \equiv k_B \ln W \quad (22.10)$$

where k_B is Boltzmann's constant and W is the number of microstates of the system corresponding to the macrostate.

In a **reversible** process, the system can be returned to its initial conditions along the same path on a PV diagram, and every point along this path is an equilibrium state. A process that does not satisfy these requirements is **irreversible**.

Concepts and Principles

A **heat engine** is a device that takes in energy by heat and, operating in a cyclic process, expels a fraction of that energy by means of work. The net work done by a heat engine in carrying a working substance through a cyclic process ($\Delta E_{\text{int}} = 0$) is

$$W_{\text{eng}} = |Q_h| - |Q_c| \quad (22.1)$$

where $|Q_h|$ is the energy taken in from a hot reservoir and $|Q_c|$ is the energy expelled to a cold reservoir.

Two ways the **second law of thermodynamics** can be stated are as follows:

- It is impossible to construct a heat engine that, operating in a cycle, produces no effect other than the input of energy by heat from a reservoir and the performance of an equal amount of work (the Kelvin–Planck statement).
- It is impossible to construct a cyclical machine whose sole effect is to transfer energy continuously by heat from one object to another object at a higher temperature without the input of energy by work (the Clausius statement).

■ **Carnot's theorem** states that no real heat engine operating (irreversibly) between the temperatures T_c and T_h can be more efficient than an engine operating reversibly in a Carnot cycle between the same two temperatures.

■ The thermal efficiency of a heat engine operating in the Carnot cycle is

$$e_c = 1 - \frac{T_c}{T_h} \quad (22.8)$$

■ The macroscopic state of a system that has a large number of microstates has four qualities that are all related: (1) *uncertainty*: because of the large number of microstates, there is a large uncertainty as to which one actually exists; (2) *choice*: again because of the large number of microstates, there is a large number of choices from which to select as to which one exists; (3) *probability*: a macrostate with a large number of microstates is more likely to exist than one with a small number of microstates; (4) *missing information*: because of the large number of microstates, there is a high amount of missing information as to which one exists. For a thermodynamic system, all four of these can be related to the state variable of **entropy**.

■ The second law of thermodynamics states that when real (irreversible) processes occur, there is a spatial spreading of energy. This spreading of energy is related to a thermodynamic state variable called **entropy** S . Therefore, yet another way the second law can be stated is as follows:

- The entropy of the Universe increases in all real processes.

■ The **change in entropy** dS of a system during a process between two infinitesimally separated equilibrium states is

$$dS = \frac{dQ_r}{T} \quad (22.12)$$

where dQ_r is the energy transfer by heat for the system for a reversible process that connects the initial and final states.

■ The change in entropy of a system during an arbitrary finite process between an initial state and a final state is

$$\Delta S = \int_i^f \frac{dQ_r}{T} \quad (22.13)$$

The value of ΔS for the system is the same for all paths connecting the initial and final states. The change in entropy for a system undergoing any reversible, cyclic process is zero.

Objective Questions

1. denotes answer available in *Student Solutions Manual/Study Guide*

- The second law of thermodynamics implies that the coefficient of performance of a refrigerator must be what? (a) less than 1 (b) less than or equal to 1 (c) greater than or equal to 1 (d) finite (e) greater than 0
- Assume a sample of an ideal gas is at room temperature. What action will *necessarily* make the entropy of the sample increase? (a) Transfer energy into it by heat. (b) Transfer energy into it irreversibly by heat. (c) Do work on it. (d) Increase either its temperature or its volume, without letting the other variable decrease. (e) None of those choices is correct.
- A refrigerator has 18.0 kJ of work done on it while 115 kJ of energy is transferred from inside its interior. What is its coefficient of performance? (a) 3.40 (b) 2.80 (c) 8.90 (d) 6.40 (e) 5.20
- Of the following, which is *not* a statement of the second law of thermodynamics? (a) No heat engine operating in a cycle can absorb energy from a reservoir and use it entirely to do work. (b) No real engine operating between two energy reservoirs can be more efficient than a Carnot engine operating between the same two reservoirs. (c) When a system undergoes a change in state, the change in the internal energy of the system is the sum of the energy transferred to the system by heat and the work done on the system. (d) The entropy of the Universe increases in all natural processes. (e) Energy will not spontaneously transfer by heat from a cold object to a hot object.
- Consider cyclic processes completely characterized by each of the following net energy inputs and outputs. In each case, the energy transfers listed are the *only* ones occurring. Classify each process as (a) possible, (b) impossible according to the first law of thermodynamics, (c) impossible according to the second law of thermodynamics, or (d) impossible according to both the first and second laws. (i) Input is 5 J of work, and output is 4 J of work. (ii) Input is 5 J of work, and output is 5 J of energy transferred by heat. (iii) Input is 5 J of energy transferred by electrical transmission, and output is 6 J of work. (iv) Input is 5 J of energy transferred by heat, and output is 5 J of energy transferred

by heat. (v) Input is 5 J of energy transferred by heat, and output is 5 J of work. (vi) Input is 5 J of energy transferred by heat, and output is 3 J of work plus 2 J of energy transferred by heat.

- A compact air-conditioning unit is placed on a table inside a well-insulated apartment and is plugged in and turned on. What happens to the average temperature of the apartment? (a) It increases. (b) It decreases. (c) It remains constant. (d) It increases until the unit warms up and then decreases. (e) The answer depends on the initial temperature of the apartment.
- A steam turbine operates at a boiler temperature of 450 K and an exhaust temperature of 300 K. What is the maximum theoretical efficiency of this system? (a) 0.240 (b) 0.500 (c) 0.333 (d) 0.667 (e) 0.150
- A thermodynamic process occurs in which the entropy of a system changes by -8 J/K . According to the second law of thermodynamics, what can you conclude about the entropy change of the environment? (a) It must be $+8 \text{ J/K}$ or less. (b) It must be between $+8 \text{ J/K}$ and 0. (c) It must be equal to $+8 \text{ J/K}$. (d) It must be $+8 \text{ J/K}$ or more. (e) It must be zero.
- A sample of a monatomic ideal gas is contained in a cylinder with a piston. Its state is represented by the dot in the PV diagram shown in Figure OQ22.9. Arrows A through E represent isobaric, isothermal, adiabatic, and isovolumetric processes that the sample can undergo. In each process except D , the volume changes by a factor of 2. All five processes are reversible. Rank the processes according to the change in entropy of the gas from the largest positive value to the

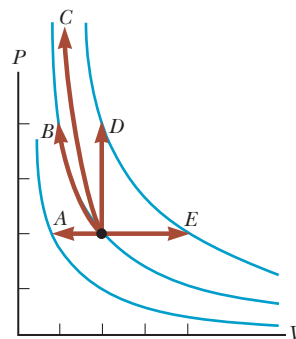


Figure OQ22.9

largest-magnitude negative value. In your rankings, display any cases of equality.

- An engine does 15.0 kJ of work while exhausting 37.0 kJ to a cold reservoir. What is the efficiency of the engine? (a) 0.150 (b) 0.288 (c) 0.333 (d) 0.450 (e) 1.20
- The arrow OA in the PV diagram shown in Figure OQ22.11 represents a reversible adiabatic expansion of an ideal gas. The same sample of gas, starting from the same state O , now undergoes an adiabatic free expansion to the same final volume. What point on the diagram could represent the final state of the gas? (a) the same point A as for the reversible expansion (b) point B (c) point C (d) any of those choices (e) none of those choices

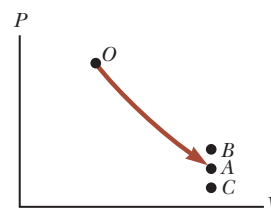


Figure OQ22.11

Conceptual Questions

I. denotes answer available in *Student Solutions Manual/Study Guide*

- The energy exhaust from a certain coal-fired electric generating station is carried by “cooling water” into Lake Ontario. The water is warm from the viewpoint of living things in the lake. Some of them congregate around the outlet port and can impede the water flow. (a) Use the theory of heat engines to explain why this action can reduce the electric power output of the station. (b) An engineer says that the electric output is reduced because of “higher back pressure on the turbine blades.” Comment on the accuracy of this statement.
- Discuss three different common examples of natural processes that involve an increase in entropy. Be sure to account for all parts of each system under consideration.
- Does the second law of thermodynamics contradict or correct the first law? Argue for your answer.
- “The first law of thermodynamics says you can’t really win, and the second law says you can’t even break even.” Explain how this statement applies to a particular device or process; alternatively, argue against the statement.
- “Energy is the mistress of the Universe, and entropy is her shadow.” Writing for an audience of general readers, argue for this statement with at least two examples. Alternatively, argue for the view that entropy is like an executive who instantly determines what will happen, whereas energy is like a bookkeeper telling us how little we can afford. (Arnold Sommerfeld suggested the idea for this question.)
- (a) Give an example of an irreversible process that occurs in nature. (b) Give an example of a process in nature that is nearly reversible.
- The device shown in Figure CQ22.7, called a thermoelectric converter, uses a series of semiconductor cells to transform internal energy to electric potential energy, which we will study in Chapter 25. In the photograph on the left, both legs of the device are at the same temperature and no electric potential energy is produced. When one leg is at a higher temperature than the other as shown in the photograph on the right, however, electric potential energy is produced as

the device extracts energy from the hot reservoir and drives a small electric motor. (a) Why is the difference in temperature necessary to produce electric potential energy in this demonstration? (b) In what sense does this intriguing experiment demonstrate the second law of thermodynamics?



Figure CQ22.7

8. A steam-driven turbine is one major component of an electric power plant. Why is it advantageous to have the temperature of the steam as high as possible?
9. Discuss the change in entropy of a gas that expands (a) at constant temperature and (b) adiabatically.
10. Suppose your roommate cleans and tidies up your messy room after a big party. Because she is creating more order, does this process represent a violation of the second law of thermodynamics?
11. Is it possible to construct a heat engine that creates no thermal pollution? Explain.
12. (a) If you shake a jar full of jelly beans of different sizes, the larger beans tend to appear near the top and the smaller ones tend to fall to the bottom. Why? (b) Does this process violate the second law of thermodynamics?
13. What are some factors that affect the efficiency of automobile engines?

Problems

ENHANCED
WebAssign The problems found in this chapter may be assigned online in Enhanced WebAssign

1. straightforward; 2. intermediate; 3. challenging

1. full solution available in the *Student Solutions Manual/Study Guide*

AMT Analysis Model tutorial available in Enhanced WebAssign

GP Guided Problem

M Master It tutorial available in Enhanced WebAssign

W Watch It video solution available in Enhanced WebAssign

Section 22.1 Heat Engines and the Second Law of Thermodynamics

1. A particular heat engine has a mechanical power output of 5.00 kW and an efficiency of 25.0%. The engine expels 8.00×10^3 J of exhaust energy in each cycle. Find (a) the energy taken in during each cycle and (b) the time interval for each cycle.
2. The work done by an engine equals one-fourth the energy it absorbs from a reservoir. (a) What is its thermal efficiency? (b) What fraction of the energy absorbed is expelled to the cold reservoir?
3. A heat engine takes in 360 J of energy from a hot reservoir and performs 25.0 J of work in each cycle. Find (a) the efficiency of the engine and (b) the energy expelled to the cold reservoir in each cycle.
4. A gun is a heat engine. In particular, it is an internal combustion piston engine that does not operate in a cycle, but comes apart during its adiabatic expansion process. A certain gun consists of 1.80 kg of iron. It fires one 2.40-g bullet at 320 m/s with an energy efficiency of 1.10%. Assume the body of the gun absorbs all the energy exhaust—the other 98.9%—and increases uniformly in temperature for a short time interval before

it loses any energy by heat into the environment. Find its temperature increase.

5. An engine absorbs 1.70 kJ from a hot reservoir at 277°C and expels 1.20 kJ to a cold reservoir at 27°C in each cycle. (a) What is the engine's efficiency? (b) How much work is done by the engine in each cycle? (c) What is the power output of the engine if each cycle lasts 0.300 s?
6. A multicylinder gasoline engine in an airplane, operating at 2.50×10^3 rev/min, takes in energy 7.89×10^3 J and exhausts 4.58×10^3 J for each revolution of the crankshaft. (a) How many liters of fuel does it consume in 1.00 h of operation if the heat of combustion of the fuel is equal to 4.03×10^7 J/L? (b) What is the mechanical power output of the engine? Ignore friction and express the answer in horsepower. (c) What is the torque exerted by the crankshaft on the load? (d) What power must the exhaust and cooling system transfer out of the engine?
7. Suppose a heat engine is connected to two energy reservoirs, one a pool of molten aluminum (660°C) and the other a block of solid mercury (-38.9°C). The engine runs by freezing 1.00 g of aluminum and melting 15.0 g of mercury during each cycle. The heat of

fusion of aluminum is 3.97×10^5 J/kg; the heat of fusion of mercury is 1.18×10^4 J/kg. What is the efficiency of this engine?

Section 22.2 Heat Pumps and Refrigerators

8. A refrigerator has a coefficient of performance equal to 5.00. The refrigerator takes in 120 J of energy from a cold reservoir in each cycle. Find (a) the work required in each cycle and (b) the energy expelled to the hot reservoir.
9. During each cycle, a refrigerator ejects 625 kJ of energy to a high-temperature reservoir and takes in 550 kJ of energy from a low-temperature reservoir. Determine (a) the work done on the refrigerant in each cycle and (b) the coefficient of performance of the refrigerator.
10. A heat pump has a coefficient of performance of 3.80 and operates with a power consumption of 7.03×10^3 W. (a) How much energy does it deliver into a home during 8.00 h of continuous operation? (b) How much energy does it extract from the outside air?
11. A refrigerator has a coefficient of performance of 3.00. The ice tray compartment is at -20.0°C , and the room temperature is 22.0°C . The refrigerator can convert 30.0 g of water at 22.0°C to 30.0 g of ice at -20.0°C each minute. What input power is required? Give your answer in watts.
12. A heat pump has a coefficient of performance equal to 4.20 and requires a power of 1.75 kW to operate. (a) How much energy does the heat pump add to a home in one hour? (b) If the heat pump is reversed so that it acts as an air conditioner in the summer, what would be its coefficient of performance?
13. A freezer has a coefficient of performance of 6.30. It is advertised as using electricity at a rate of 457 kWh/yr. (a) On average, how much energy does it use in a single day? (b) On average, how much energy does it remove from the refrigerator in a single day? (c) What maximum mass of water at 20.0°C could the freezer freeze in a single day? *Note:* One kilowatt-hour (kWh) is an amount of energy equal to running a 1-kW appliance for one hour.

Section 22.3 Reversible and Irreversible Processes

Section 22.4 The Carnot Engine

14. A heat engine operates between a reservoir at 25.0°C and one at 375°C . What is the maximum efficiency possible for this engine?
15. One of the most efficient heat engines ever built is a coal-fired steam turbine in the Ohio River valley, operating between 1870°C and 430°C . (a) What is its maximum theoretical efficiency? (b) The actual efficiency of the engine is 42.0%. How much mechanical power does the engine deliver if it absorbs 1.40×10^5 J of energy each second from its hot reservoir?
16. *Why is the following situation impossible?* An inventor comes to a patent office with the claim that her heat engine, which employs water as a working substance,

has a thermodynamic efficiency of 0.110. Although this efficiency is low compared with typical automobile engines, she explains that her engine operates between an energy reservoir at room temperature and a water-ice mixture at atmospheric pressure and therefore requires no fuel other than that to make the ice. The patent is approved, and working prototypes of the engine prove the inventor's efficiency claim.

17. A Carnot engine has a power output of 150 kW. The engine operates between two reservoirs at 20.0°C and 500°C . (a) How much energy enters the engine by heat per hour? (b) How much energy is exhausted by heat per hour?
18. A Carnot engine has a power output P . The engine operates between two reservoirs at temperature T_c and T_h . (a) How much energy enters the engine by heat in a time interval Δt ? (b) How much energy is exhausted by heat in the time interval Δt ?
19. What is the coefficient of performance of a refrigerator that operates with Carnot efficiency between temperatures -3.00°C and $+27.0^\circ\text{C}$?
20. An ideal refrigerator or ideal heat pump is equivalent to a Carnot engine running in reverse. That is, energy $|Q_c|$ is taken in from a cold reservoir and energy $|Q_h|$ is rejected to a hot reservoir. (a) Show that the work that must be supplied to run the refrigerator or heat pump is

$$W = \frac{T_h - T_c}{T_c} |Q_c|$$

(b) Show that the coefficient of performance (COP) of the ideal refrigerator is

$$\text{COP} = \frac{T_c}{T_h - T_c}$$

21. What is the maximum possible coefficient of performance of a heat pump that brings energy from outdoors at -3.00°C into a 22.0°C house? *Note:* The work done to run the heat pump is also available to warm the house.
22. How much work does an ideal Carnot refrigerator require to remove 1.00 J of energy from liquid helium at 4.00 K and expel this energy to a room-temperature (293-K) environment?
23. If a 35.0%-efficient Carnot heat engine (Fig. 22.2) is run in reverse so as to form a refrigerator (Fig. 22.4), what would be this refrigerator's coefficient of performance?
24. A power plant operates at a 32.0% efficiency during the summer when the seawater used for cooling is at 20.0°C . The plant uses 350°C steam to drive turbines. If the plant's efficiency changes in the same proportion as the ideal efficiency, what would be the plant's efficiency in the winter, when the seawater is at 10.0°C ?
25. A heat engine is being designed to have a Carnot efficiency of 65.0% when operating between two energy reservoirs. (a) If the temperature of the cold reservoir is 20.0°C , what must be the temperature of the hot res-

- ervoir? (b) Can the actual efficiency of the engine be equal to 65.0%? Explain.
26. A Carnot heat engine operates between temperatures T_h and T_c . (a) If $T_h = 500$ K and $T_c = 350$ K, what is the efficiency of the engine? (b) What is the change in its efficiency for each degree of increase in T_h above 500 K? (c) What is the change in its efficiency for each degree of change in T_c ? (d) Does the answer to part (c) depend on T_c ? Explain.
27. An ideal gas is taken through a Carnot cycle. The isothermal expansion occurs at 250°C , and the isothermal compression takes place at 50.0°C . The gas takes in 1.20×10^3 J of energy from the hot reservoir during the isothermal expansion. Find (a) the energy expelled to the cold reservoir in each cycle and (b) the net work done by the gas in each cycle.
28. An electric power plant that would make use of the temperature gradient in the ocean has been proposed. The system is to operate between 20.0°C (surface-water temperature) and 5.00°C (water temperature at a depth of about 1 km). (a) What is the maximum efficiency of such a system? (b) If the electric power output of the plant is 75.0 MW, how much energy is taken in from the warm reservoir per hour? (c) In view of your answer to part (a), explain whether you think such a system is worthwhile. Note that the “fuel” is free.
29. A heat engine operates in a Carnot cycle between 80.0°C and 350°C . It absorbs 21 000 J of energy per cycle from the hot reservoir. The duration of each cycle is 1.00 s. (a) What is the mechanical power output of this engine? (b) How much energy does it expel in each cycle by heat?
30. Suppose you build a two-engine device with the exhaust energy output from one heat engine supplying the input energy for a second heat engine. We say that the two engines are running *in series*. Let e_1 and e_2 represent the efficiencies of the two engines. (a) The overall efficiency of the two-engine device is defined as the total work output divided by the energy put into the first engine by heat. Show that the overall efficiency e is given by

$$e = e_1 + e_2 - e_1e_2$$

What If? For parts (b) through (e) that follow, assume the two engines are Carnot engines. Engine 1 operates between temperatures T_h and T_i . The gas in engine 2 varies in temperature between T_i and T_c . In terms of the temperatures, (b) what is the efficiency of the combination engine? (c) Does an improvement in net efficiency result from the use of two engines instead of one? (d) What value of the intermediate temperature T_i results in equal work being done by each of the two engines in series? (e) What value of T_i results in each of the two engines in series having the same efficiency?

31. Argon enters a turbine at a rate of 80.0 kg/min, a temperature of 800°C , and a pressure of 1.50 MPa. It expands adiabatically as it pushes on the turbine blades and exits at pressure 300 kPa. (a) Calculate its tem-

perature at exit. (b) Calculate the (maximum) power output of the turning turbine. (c) The turbine is one component of a model closed-cycle gas turbine engine. Calculate the maximum efficiency of the engine.

32. At point A in a Carnot cycle, 2.34 mol of a monatomic ideal gas has a pressure of 1 400 kPa, a volume of 10.0 L, and a temperature of 720 K. The gas expands isothermally to point B and then expands adiabatically to point C , where its volume is 24.0 L. An isothermal compression brings it to point D , where its volume is 15.0 L. An adiabatic process returns the gas to point A . (a) Determine all the unknown pressures, volumes, and temperatures as you fill in the following table:

	P	V	T
A	1 400 kPa	10.0 L	720 K
B			
C		24.0 L	
D		15.0 L	

(b) Find the energy added by heat, the work done by the engine, and the change in internal energy for each of the steps $A \rightarrow B$, $B \rightarrow C$, $C \rightarrow D$, and $D \rightarrow A$. (c) Calculate the efficiency $W_{\text{net}}/|Q_h|$. (d) Show that the efficiency is equal to $1 - T_c/T_A$, the Carnot efficiency.

33. An electric generating station is designed to have an electric output power of 1.40 MW using a turbine with two-thirds the efficiency of a Carnot engine. The exhaust energy is transferred by heat into a cooling tower at 110°C . (a) Find the rate at which the station exhausts energy by heat as a function of the fuel combustion temperature T_h . (b) If the firebox is modified to run hotter by using more advanced combustion technology, how does the amount of energy exhaust change? (c) Find the exhaust power for $T_h = 800^\circ\text{C}$. (d) Find the value of T_h for which the exhaust power would be only half as large as in part (c). (e) Find the value of T_h for which the exhaust power would be one-fourth as large as in part (c).
34. An ideal (Carnot) freezer in a kitchen has a constant temperature of 260 K, whereas the air in the kitchen has a constant temperature of 300 K. Suppose the insulation for the freezer is not perfect but rather conducts energy into the freezer at a rate of 0.150 W. Determine the average power required for the freezer’s motor to maintain the constant temperature in the freezer.
35. A heat pump used for heating shown in Figure P22.35 is essentially an air conditioner installed backward. It

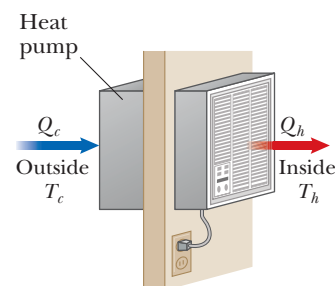


Figure P22.35

extracts energy from colder air outside and deposits it in a warmer room. Suppose the ratio of the actual energy entering the room to the work done by the device's motor is 10.0% of the theoretical maximum ratio. Determine the energy entering the room per joule of work done by the motor given that the inside temperature is 20.0°C and the outside temperature is -5.00°C .

Section 22.5 Gasoline and Diesel Engines

Note: For problems in this section, assume the gas in the engine is diatomic with $\gamma = 1.40$.

36. A gasoline engine has a compression ratio of 6.00. (a) What is the efficiency of the engine if it operates in an idealized Otto cycle? (b) **What If?** If the actual efficiency is 15.0%, what fraction of the fuel is wasted as a result of friction and energy transfers by heat that could be avoided in a reversible engine? Assume complete combustion of the air–fuel mixture.
37. In a cylinder of an automobile engine, immediately after combustion the gas is confined to a volume of 50.0 cm^3 and has an initial pressure of $3.00 \times 10^6\text{ Pa}$. The piston moves outward to a final volume of 300 cm^3 , and the gas expands without energy transfer by heat. (a) What is the final pressure of the gas? (b) How much work is done by the gas in expanding?
38. An idealized diesel engine operates in a cycle known as the *air-standard diesel cycle* shown in Figure P22.38. Fuel is sprayed into the cylinder at the point of maximum compression, B . Combustion occurs during the expansion $B \rightarrow C$, which is modeled as an isobaric process. Show that the efficiency of an engine operating in this idealized diesel cycle is

$$e = 1 - \frac{1}{\gamma} \left(\frac{T_D - T_A}{T_C - T_B} \right)$$

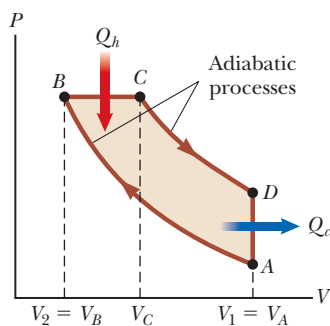


Figure P22.38

Section 22.6 Entropy

39. Prepare a table like Table 22.1 by using the same procedure (a) for the case in which you draw three marbles from your bag rather than four and (b) for the case in which you draw five marbles rather than four.
40. (a) Prepare a table like Table 22.1 for the following occurrence. You toss four coins into the air simulta-

neously and then record the results of your tosses in terms of the numbers of heads (H) and tails (T) that result. For example, HHTH and HTHH are two possible ways in which three heads and one tail can be achieved. (b) On the basis of your table, what is the most probable result recorded for a toss?

41. If you roll two dice, what is the total number of ways in which you can obtain (a) a 12 and (b) a 7?

Section 22.7 Changes in Entropy for Thermodynamic Systems

Section 22.8 Entropy and the Second Law

42. An ice tray contains 500 g of liquid water at 0°C . Calculate the change in entropy of the water as it freezes slowly and completely at 0°C .
43. A Styrofoam cup holding 125 g of hot water at 100°C cools to room temperature, 20.0°C . What is the change in entropy of the room? Neglect the specific heat of the cup and any change in temperature of the room.
44. A 1.00-kg iron horseshoe is taken from a forge at 900°C and dropped into 4.00 kg of water at 10.0°C . Assuming that no energy is lost by heat to the surroundings, determine the total entropy change of the horseshoe-plus-water system. (*Suggestion:* Note that $dQ = mc\,dT$.)
45. A 1 500-kg car is moving at 20.0 m/s. The driver brakes **AMT** to a stop. The brakes cool off to the temperature of the surrounding air, which is nearly constant at 20.0°C . What is the total entropy change?
46. Two $2.00 \times 10^3\text{-kg}$ cars both traveling at 20.0 m/s **AMT** undergo a head-on collision and stick together. Find the change in entropy of the surrounding air resulting from the collision if the air temperature is 23.0°C . Ignore the energy carried away from the collision by sound.
47. A 70.0-kg log falls from a height of 25.0 m into a lake. If **AMT** the log, the lake, and the air are all at 300 K, find the change in entropy of the air during this process.
48. A 1.00-mol sample of H_2 gas is contained in the left side of the container shown in Figure P22.48, which has equal volumes on the left and right. The right side is evacuated. When the valve is opened, the gas streams into the right side. (a) What is the entropy change of the gas? (b) Does the temperature of the gas change? Assume the container is so large that the hydrogen behaves as an ideal gas.

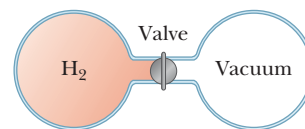


Figure P22.48

49. A 2.00-L container has a center partition that divides it into two equal parts as shown in Figure P22.49. The left side contains 0.044 0 mol of H_2 gas, and the right side contains 0.044 0 mol of O_2 gas. Both gases are at

room temperature and at atmospheric pressure. The partition is removed, and the gases are allowed to mix. What is the entropy increase of the system?

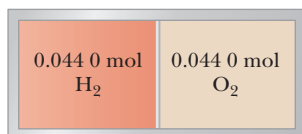


Figure P22.49

50. What change in entropy occurs when a 27.9-g ice cube at -12°C is transformed into steam at 115°C ?
51. Calculate the change in entropy of 250 g of water warmed slowly from 20.0°C to 80.0°C .
52. How fast are you personally making the entropy of the Universe increase right now? Compute an order-of-magnitude estimate, stating what quantities you take as data and the values you measure or estimate for them.
53. When an aluminum bar is connected between a hot reservoir at 725 K and a cold reservoir at 310 K, 2.50 kJ of energy is transferred by heat from the hot reservoir to the cold reservoir. In this irreversible process, calculate the change in entropy of (a) the hot reservoir, (b) the cold reservoir, and (c) the Universe, neglecting any change in entropy of the aluminum rod.
54. When a metal bar is connected between a hot reservoir at T_h and a cold reservoir at T_c , the energy transferred by heat from the hot reservoir to the cold reservoir is Q . In this irreversible process, find expressions for the change in entropy of (a) the hot reservoir, (b) the cold reservoir, and (c) the Universe, neglecting any change in entropy of the metal rod.
55. The temperature at the surface of the Sun is approximately 5 800 K, and the temperature at the surface of the Earth is approximately 290 K. What entropy change of the Universe occurs when 1.00×10^3 J of energy is transferred by radiation from the Sun to the Earth?
- M**
W
- Additional Problems**
56. Calculate the increase in entropy of the Universe when you add 20.0 g of 5.00°C cream to 200 g of 60.0°C coffee. Assume that the specific heats of cream and coffee are both $4.20 \text{ J/g} \cdot ^{\circ}\text{C}$.
57. How much work is required, using an ideal Carnot refrigerator, to change 0.500 kg of tap water at 10.0°C into ice at -20.0°C ? Assume that the freezer compartment is held at -20.0°C and that the refrigerator exhausts energy into a room at 20.0°C .
58. A steam engine is operated in a cold climate where the exhaust temperature is 0°C . (a) Calculate the theoretical maximum efficiency of the engine using an intake steam temperature of 100°C . (b) If, instead, superheated steam at 200°C is used, find the maximum possible efficiency.
59. The energy absorbed by an engine is three times greater than the work it performs. (a) What is its thermal efficiency? (b) What fraction of the energy absorbed is expelled to the cold reservoir?
60. Every second at Niagara Falls, some $5.00 \times 10^3 \text{ m}^3$ of water falls a distance of 50.0 m. What is the increase in entropy of the Universe per second due to the falling water? Assume the mass of the surroundings is so great that its temperature and that of the water stay nearly constant at 20.0°C . Also assume a negligible amount of water evaporates.
61. Find the maximum (Carnot) efficiency of an engine that absorbs energy from a hot reservoir at 545°C and exhausts energy to a cold reservoir at 185°C .
62. In 1993, the U.S. government instituted a requirement that all room air conditioners sold in the United States must have an energy efficiency ratio (EER) of 10 or higher. The EER is defined as the ratio of the cooling capacity of the air conditioner, measured in British thermal units per hour, or Btu/h, to its electrical power requirement in watts. (a) Convert the EER of 10.0 to dimensionless form, using the conversion $1 \text{ Btu} = 1055 \text{ J}$. (b) What is the appropriate name for this dimensionless quantity? (c) In the 1970s, it was common to find room air conditioners with EERs of 5 or lower. State how the operating costs compare for 10 000-Btu/h air conditioners with EERs of 5.00 and 10.0. Assume each air conditioner operates for 1 500 h during the summer in a city where electricity costs 17.0¢ per kWh.
63. Energy transfers by heat through the exterior walls and roof of a house at a rate of $5.00 \times 10^3 \text{ J/s} = 5.00 \text{ kW}$ when the interior temperature is 22.0°C and the outside temperature is -5.00°C . (a) Calculate the electric power required to maintain the interior temperature at 22.0°C if the power is used in electric resistance heaters that convert all the energy transferred in by electrical transmission into internal energy. (b) **What If?** Calculate the electric power required to maintain the interior temperature at 22.0°C if the power is used to drive an electric motor that operates the compressor of a heat pump that has a coefficient of performance equal to 60.0% of the Carnot-cycle value.
64. One mole of neon gas is heated from 300 K to 420 K at constant pressure. Calculate (a) the energy Q transferred to the gas, (b) the change in the internal energy of the gas, and (c) the work done *on* the gas. Note that neon has a molar specific heat of $C_p = 20.79 \text{ J/mol} \cdot \text{K}$ for a constant-pressure process.
65. An airtight freezer holds n moles of air at 25.0°C and 1.00 atm. The air is then cooled to -18.0°C . (a) What is the change in entropy of the air if the volume is held constant? (b) What would the entropy change be if the pressure were maintained at 1.00 atm during the cooling?
66. Suppose an ideal (Carnot) heat pump could be constructed for use as an air conditioner. (a) Obtain an

expression for the coefficient of performance (COP) for such an air conditioner in terms of T_h and T_c . (b) Would such an air conditioner operate on a smaller energy input if the difference in the operating temperatures were greater or smaller? (c) Compute the COP for such an air conditioner if the indoor temperature is 20.0°C and the outdoor temperature is 40.0°C .

- 67.** In 1816, Robert Stirling, a Scottish clergyman, patented the *Stirling engine*, which has found a wide variety of applications ever since, including current use in solar energy collectors to transform sunlight into electricity. Fuel is burned externally to warm one of the engine's two cylinders. A fixed quantity of inert gas moves cyclically between the cylinders, expanding in the hot one and contracting in the cold one. Figure P22.67 represents a model for its thermodynamic cycle. Consider n moles of an ideal monatomic gas being taken once through the cycle, consisting of two isothermal processes at temperatures $3T_i$ and T_i and two constant-volume processes. Let us find the efficiency of this engine. (a) Find the energy transferred by heat into the gas during the isovolumetric process AB . (b) Find the energy transferred by heat into the gas during the isothermal process BC . (c) Find the energy transferred by heat into the gas during the isovolumetric process CD . (d) Find the energy transferred by heat into the gas during the isothermal process DA . (e) Identify which of the results from parts (a) through (d) are positive and evaluate the energy input to the engine by heat. (f) From the first law of thermodynamics, find the work done by the engine. (g) From the results of parts (e) and (f), evaluate the efficiency of the engine. A Stirling engine is easier to manufacture than an internal combustion engine or a turbine. It can run on burning garbage. It can run on the energy transferred by sunlight and produce no material exhaust. Stirling engines are not currently used in automobiles due to long startup times and poor acceleration response.

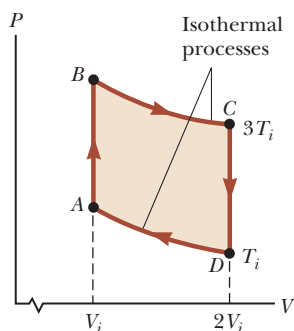


Figure P22.67

- 68.** A firebox is at 750 K , and the ambient temperature is 300 K . The efficiency of a Carnot engine doing 150 J of work as it transports energy between these constant-temperature baths is 60.0% . The Carnot engine must take in energy $150\text{ J}/0.600 = 250\text{ J}$ from the hot reservoir and must put out 100 J of energy by heat into the

environment. To follow Carnot's reasoning, suppose some other heat engine S could have an efficiency of 70.0% . (a) Find the energy input and exhaust energy output of engine S as it does 150 J of work. (b) Let engine S operate as in part (a) and run the Carnot engine in reverse between the same reservoirs. The output work of engine S is the input work for the Carnot refrigerator. Find the total energy transferred to or from the firebox and the total energy transferred to or from the environment as both engines operate together. (c) Explain how the results of parts (a) and (b) show that the Clausius statement of the second law of thermodynamics is violated. (d) Find the energy input and work output of engine S as it puts out exhaust energy of 100 J . Let engine S operate as in part (c) and contribute 150 J of its work output to running the Carnot engine in reverse. Find (e) the total energy the firebox puts out as both engines operate together, (f) the total work output, and (g) the total energy transferred to the environment. (h) Explain how the results show that the Kelvin-Planck statement of the second law is violated. Therefore, our assumption about the efficiency of engine S must be false. (i) Let the engines operate together through one cycle as in part (d). Find the change in entropy of the Universe. (j) Explain how the result of part (i) shows that the entropy statement of the second law is violated.

- 69. Review.** This problem complements Problem 88 in Chapter 10. In the operation of a single-cylinder internal combustion piston engine, one charge of fuel explodes to drive the piston outward in the *power stroke*. Part of its energy output is stored in a turning flywheel. This energy is then used to push the piston inward to compress the next charge of fuel and air. In this compression process, assume an original volume of 0.120 L of a diatomic ideal gas at atmospheric pressure is compressed adiabatically to one-eighth of its original volume. (a) Find the work input required to compress the gas. (b) Assume the flywheel is a solid disk of mass 5.10 kg and radius 8.50 cm , turning freely without friction between the power stroke and the compression stroke. How fast must the flywheel turn immediately after the power stroke? This situation represents the minimum angular speed at which the engine can operate without stalling. (c) When the engine's operation is well above the point of stalling, assume the flywheel puts 5.00% of its maximum energy into compressing the next charge of fuel and air. Find its maximum angular speed in this case.

- 70.** A biology laboratory is maintained at a constant temperature of 7.00°C by an air conditioner, which is vented to the air outside. On a typical hot summer day, the outside temperature is 27.0°C and the air-conditioning unit emits energy to the outside at a rate of 10.0 kW . Model the unit as having a coefficient of performance (COP) equal to 40.0% of the COP of an ideal Carnot device. (a) At what rate does the air conditioner remove energy from the laboratory? (b) Calculate the power required for the work input. (c) Find the change

in entropy of the Universe produced by the air conditioner in 1.00 h. (d) **What If?** The outside temperature increases to 32.0°C . Find the fractional change in the COP of the air conditioner.

71. A power plant, having a Carnot efficiency, produces 1.00 GW of electrical power from turbines that take in steam at 500 K and reject water at 300 K into a flowing river. The water downstream is 6.00 K warmer due to the output of the power plant. Determine the flow rate of the river.
72. A power plant, having a Carnot efficiency, produces electric power P from turbines that take in energy from steam at temperature T_h and discharge energy at temperature T_c through a heat exchanger into a flowing river. The water downstream is warmer by ΔT due to the output of the power plant. Determine the flow rate of the river.
73. A 1.00-mol sample of an ideal monatomic gas is taken through the cycle shown in Figure P22.73. The process $A \rightarrow B$ is a reversible isothermal expansion. Calculate (a) the net work done by the gas, (b) the energy added to the gas by heat, (c) the energy exhausted from the gas by heat, and (d) the efficiency of the cycle. (e) Explain how the efficiency compares with that of a Carnot engine operating between the same temperature extremes.

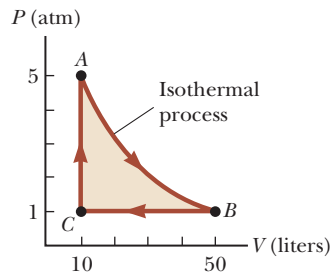


Figure P22.73

74. A system consisting of n moles of an ideal gas with molar specific heat at constant pressure C_p undergoes two reversible processes. It starts with pressure P_i and volume V_i , expands isothermally, and then contracts adiabatically to reach a final state with pressure P_i and volume $3V_i$. (a) Find its change in entropy in the isothermal process. (The entropy does not change in the adiabatic process.) (b) **What If?** Explain why the answer to part (a) must be the same as the answer to Problem 77. (You do not need to solve Problem 77 to answer this question.)
75. A heat engine operates between two reservoirs at $T_2 = 600\text{ K}$ and $T_1 = 350\text{ K}$. It takes in $1.00 \times 10^3\text{ J}$ of energy from the higher-temperature reservoir and performs 250 J of work. Find (a) the entropy change of the Universe ΔS_U for this process and (b) the work W that could have been done by an ideal Carnot engine operating between these two reservoirs. (c) Show that the difference between the amounts of work done in parts (a) and (b) is $T_1 \Delta S_U$.

76. A 1.00-mol sample of a monatomic ideal gas is taken through the cycle shown in Figure P22.76. At point A, the pressure, volume, and temperature are P_i , V_i , and T_i , respectively. In terms of R and T_i , find (a) the total energy entering the system by heat per cycle, (b) the total energy leaving the system by heat per cycle, and (c) the efficiency of an engine operating in this cycle. (d) Explain how the efficiency compares with that of an engine operating in a Carnot cycle between the same temperature extremes.

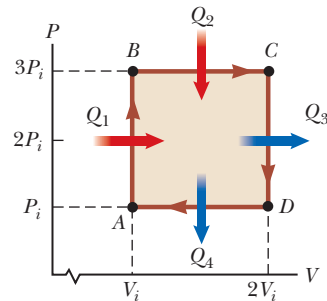


Figure P22.76

77. A sample consisting of n moles of an ideal gas undergoes a reversible isobaric expansion from volume V_i to volume $3V_i$. Find the change in entropy of the gas by calculating $\int_i^f dQ/T$, where $dQ = nC_p dT$.
78. An athlete whose mass is 70.0 kg drinks 16.0 ounces (454 g) of refrigerated water. The water is at a temperature of 35.0°F . (a) Ignoring the temperature change of the body that results from the water intake (so that the body is regarded as a reservoir always at 98.6°F), find the entropy increase of the entire system. (b) **What If?** Assume the entire body is cooled by the drink and the average specific heat of a person is equal to the specific heat of liquid water. Ignoring any other energy transfers by heat and any metabolic energy release, find the athlete's temperature after she drinks the cold water given an initial body temperature of 98.6°F . (c) Under these assumptions, what is the entropy increase of the entire system? (d) State how this result compares with the one you obtained in part (a).
79. A sample of an ideal gas expands isothermally, doubling in volume. (a) Show that the work done on the gas in expanding is $W = -nRT \ln 2$. (b) Because the internal energy E_{int} of an ideal gas depends solely on its temperature, the change in internal energy is zero during the expansion. It follows from the first law that the energy input to the gas by heat during the expansion is equal to the energy output by work. Does this process have 100% efficiency in converting energy input by heat into work output? (c) Does this conversion violate the second law? Explain.
80. Why is the following situation impossible? Two samples of water are mixed at constant pressure inside an insulated container: 1.00 kg of water at 10.0°C and 1.00 kg of water at 30.0°C . Because the container is insulated, there is no exchange of energy by heat between the water and the

environment. Furthermore, the amount of energy that leaves the warm water by heat is equal to the amount that enters the cool water by heat. Therefore, the entropy change of the Universe is zero for this process.

Challenge Problems

81. A 1.00-mol sample of an ideal gas ($\gamma = 1.40$) is carried through the Carnot cycle described in Figure 22.11. At point *A*, the pressure is 25.0 atm and the temperature is 600 K. At point *C*, the pressure is 1.00 atm and the temperature is 400 K. (a) Determine the pressures and volumes at points *A*, *B*, *C*, and *D*. (b) Calculate the net work done per cycle.

82. The compression ratio of an Otto cycle as shown in Figure 22.13 is $V_A/V_B = 8.00$. At the beginning *A* of the compression process, 500 cm³ of gas is at 100 kPa and 20.0°C. At the beginning of the adiabatic expansion, the temperature is $T_C = 750^\circ\text{C}$. Model the working fluid as an ideal gas with $\gamma = 1.40$. (a) Fill in this table to follow the states of the gas:

	T (K)	P (kPa)	V (cm ³)
<i>A</i>	293	100	500
<i>B</i>			
<i>C</i>	1 023		
<i>D</i>			

(b) Fill in this table to follow the processes:

	Q	W	ΔE_{int}
$A \rightarrow B$			
$B \rightarrow C$			
$C \rightarrow D$			
$D \rightarrow A$			
<i>ABCD</i>			

(c) Identify the energy input $|Q_h|$, (d) the energy exhaust $|Q_c|$, and (e) the net output work W_{eng} . (f) Calculate the thermal efficiency. (g) Find the number of crankshaft revolutions per minute required for a one-cylinder engine to have an output power of 1.00 kW = 1.34 hp. *Note:* The thermodynamic cycle involves four piston strokes.

Electricity and Magnetism

PART

4

A Transrapid maglev train pulls into a station in Shanghai, China. The word *maglev* is an abbreviated form of *magnetic levitation*. This train makes no physical contact with its rails; its weight is totally supported by electromagnetic forces. In this part of the book, we will study these forces. (OTHK/Asia Images/Jupiterimages)



We now study the branch of physics concerned with electric and magnetic phenomena. The laws of electricity and magnetism play a central role in the operation of such devices as smartphones, televisions, electric motors, computers, high-energy accelerators, and other electronic devices. More fundamentally, the interatomic and intermolecular forces responsible for the formation of solids and liquids are electric in origin.

Evidence in Chinese documents suggests magnetism was observed as early as 2000 BC. The ancient Greeks observed electric and magnetic phenomena possibly as early as 700 BC. The Greeks knew about magnetic forces from observations that the naturally occurring stone *magnetite* (Fe_3O_4) is attracted to iron. (The word *electric* comes from *elektron*, the Greek word for "amber." The word *magnetic* comes from *Magnesia*, the name of the district of Greece where magnetite was first found.)

Not until the early part of the nineteenth century did scientists establish that electricity and magnetism are related phenomena. In 1819, Hans Oersted discovered that a compass needle is deflected when placed near a circuit carrying an electric current. In 1831, Michael Faraday and, almost simultaneously, Joseph Henry showed that when a wire is moved near a magnet (or, equivalently, when a magnet is moved near a wire), an electric current is established in the wire. In 1873, James Clerk Maxwell used these observations and other experimental facts as a basis for formulating the laws of electromagnetism as we know them today. (*Electromagnetism* is a name given to the combined study of electricity and magnetism.)

Maxwell's contributions to the field of electromagnetism were especially significant because the laws he formulated are basic to *all* forms of electromagnetic phenomena. His work is as important as Newton's work on the laws of motion and the theory of gravitation. ■

- 23.1 Properties of Electric Charges
- 23.2 Charging Objects by Induction
- 23.3 Coulomb's Law
- 23.4 Analysis Model: Particle in a Field (Electric)
- 23.5 Electric Field of a Continuous Charge Distribution
- 23.6 Electric Field Lines
- 23.7 Motion of a Charged Particle in a Uniform Electric Field



This young woman is enjoying the effects of electrically charging her body. Each individual hair on her head becomes charged and exerts a repulsive force on the other hairs, resulting in the "stand-up" hairdo seen here. (Ted Kinsman / Photo Researchers, Inc.)

In this chapter, we begin the study of electromagnetism. The first link that we will make to our previous study is through the concept of *force*. The electromagnetic force between charged particles is one of the fundamental forces of nature. We begin by describing some basic properties of one manifestation of the electromagnetic force, the electric force. We then discuss Coulomb's law, which is the fundamental law governing the electric force between any two charged particles. Next, we introduce the concept of an electric field associated with a charge distribution and describe its effect on other charged particles. We then show how to use Coulomb's law to calculate the electric field for a given charge distribution. The chapter concludes with a discussion of the motion of a charged particle in a uniform electric field.

The second link between electromagnetism and our previous study is through the concept of *energy*. We will discuss that connection in Chapter 25.

23.1 Properties of Electric Charges

A number of simple experiments demonstrate the existence of electric forces. For example, after rubbing a balloon on your hair on a dry day, you will find that the balloon attracts bits of paper. The attractive force is often strong enough to suspend the paper from the balloon.

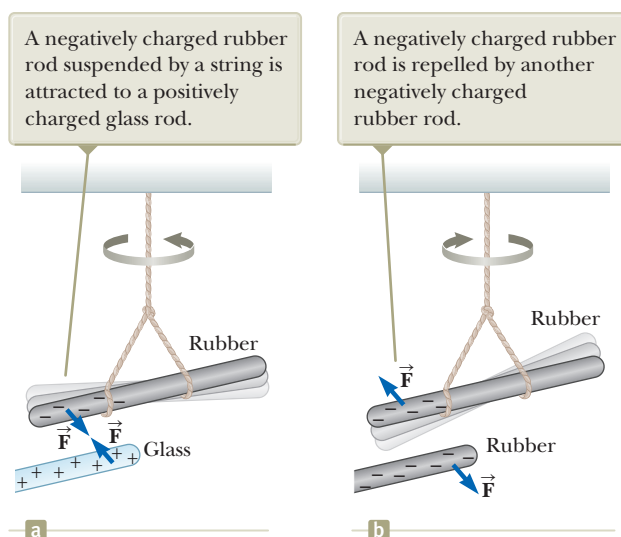


Figure 23.1 The electric force between (a) oppositely charged objects and (b) like-charged objects.

When materials behave in this way, they are said to be *electrified* or to have become **electrically charged**. You can easily electrify your body by vigorously rubbing your shoes on a wool rug. Evidence of the electric charge on your body can be detected by lightly touching (and startling) a friend. Under the right conditions, you will see a spark when you touch and both of you will feel a slight tingle. (Experiments such as these work best on a dry day because an excessive amount of moisture in the air can cause any charge you build up to “leak” from your body to the Earth.)

In a series of simple experiments, it was found that there are two kinds of electric charges, which were given the names **positive** and **negative** by Benjamin Franklin (1706–1790). Electrons are identified as having negative charge, and protons are positively charged. To verify that there are two types of charge, suppose a hard rubber rod that has been rubbed on fur is suspended by a string as shown in Figure 23.1. When a glass rod that has been rubbed on silk is brought near the rubber rod, the two attract each other (Fig. 23.1a). On the other hand, if two charged rubber rods (or two charged glass rods) are brought near each other as shown in Figure 23.1b, the two repel each other. This observation shows that the rubber and glass have two different types of charge on them. On the basis of these observations, we conclude that **charges of the same sign repel one another and charges with opposite signs attract one another**.

Using the convention suggested by Franklin, the electric charge on the glass rod is called positive and that on the rubber rod is called negative. Therefore, any charged object attracted to a charged rubber rod (or repelled by a charged glass rod) must have a positive charge, and any charged object repelled by a charged rubber rod (or attracted to a charged glass rod) must have a negative charge.

Another important aspect of electricity that arises from experimental observations is that **electric charge is always conserved** in an isolated system. That is, when one object is rubbed against another, charge is not created in the process. The electrified state is due to a *transfer* of charge from one object to the other. One object gains some amount of negative charge while the other gains an equal amount of positive charge. For example, when a glass rod is rubbed on silk as in Figure 23.2, the silk obtains a negative charge equal in magnitude to the positive charge on the glass rod. We now know from our understanding of atomic structure that electrons are transferred in the rubbing process from the glass to the silk. Similarly, when rubber is rubbed on fur, electrons are transferred from the fur to the rubber, giving the rubber a net negative charge and the fur a net positive charge. This process works because neutral, uncharged matter contains as many positive charges (protons within atomic nuclei)

Because of conservation of charge, each electron adds negative charge to the silk and an equal positive charge is left on the glass rod.

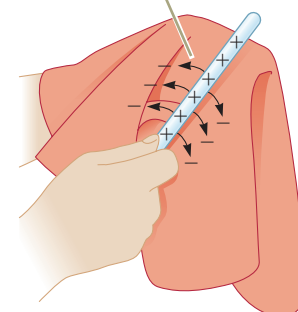


Figure 23.2 When a glass rod is rubbed with silk, electrons are transferred from the glass to the silk.

◀ **Electric charge is conserved**

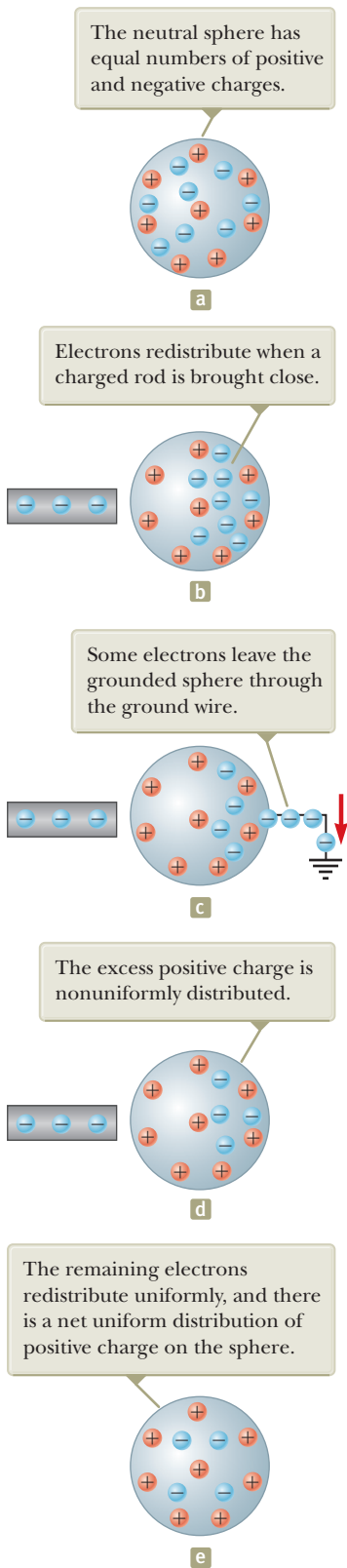


Figure 23.3 Charging a metallic object by *induction*. (a) A neutral metallic sphere. (b) A charged rubber rod is placed near the sphere. (c) The sphere is grounded. (d) The ground connection is removed. (e) The rod is removed.

as negative charges (electrons). Conservation of electric charge for an isolated system is like conservation of energy, momentum, and angular momentum, but we don't identify an analysis model for this conservation principle because it is not used often enough in the mathematical solution to problems.

In 1909, Robert Millikan (1868–1953) discovered that electric charge always occurs as integral multiples of a fundamental amount of charge e (see Section 25.7). In modern terms, the electric charge q is said to be **quantized**, where q is the standard symbol used for charge as a variable. That is, electric charge exists as discrete “packets,” and we can write $q = \pm Ne$, where N is some integer. Other experiments in the same period showed that the electron has a charge $-e$ and the proton has a charge of equal magnitude but opposite sign $+e$. Some particles, such as the neutron, have no charge.

Quick Quiz 23.1 Three objects are brought close to each other, two at a time. When objects A and B are brought together, they repel. When objects B and C are brought together, they also repel. Which of the following are true? (a) Objects A and C possess charges of the same sign. (b) Objects A and C possess charges of opposite sign. (c) All three objects possess charges of the same sign. (d) One object is neutral. (e) Additional experiments must be performed to determine the signs of the charges.

23.2 Charging Objects by Induction

It is convenient to classify materials in terms of the ability of electrons to move through the material:

Electrical **conductors** are materials in which some of the electrons are free electrons¹ that are not bound to atoms and can move relatively freely through the material; electrical **insulators** are materials in which all electrons are bound to atoms and cannot move freely through the material.

Materials such as glass, rubber, and dry wood fall into the category of electrical insulators. When such materials are charged by rubbing, only the area rubbed becomes charged and the charged particles are unable to move to other regions of the material.

In contrast, materials such as copper, aluminum, and silver are good electrical conductors. When such materials are charged in some small region, the charge readily distributes itself over the entire surface of the material.

Semiconductors are a third class of materials, and their electrical properties are somewhere between those of insulators and those of conductors. Silicon and germanium are well-known examples of semiconductors commonly used in the fabrication of a variety of electronic chips used in computers, cellular telephones, and home theater systems. The electrical properties of semiconductors can be changed over many orders of magnitude by the addition of controlled amounts of certain atoms to the materials.

To understand how to charge a conductor by a process known as **induction**, consider a neutral (uncharged) conducting sphere insulated from the ground as shown in Figure 23.3a. There are an equal number of electrons and protons in the sphere if the charge on the sphere is exactly zero. When a negatively charged rubber rod is brought near the sphere, electrons in the region nearest the rod experience a repulsive force and migrate to the opposite side of the sphere. This migration leaves

¹A metal atom contains one or more outer electrons, which are weakly bound to the nucleus. When many atoms combine to form a metal, the *free electrons* are these outer electrons, which are not bound to any one atom. These electrons move about the metal in a manner similar to that of gas molecules moving in a container.

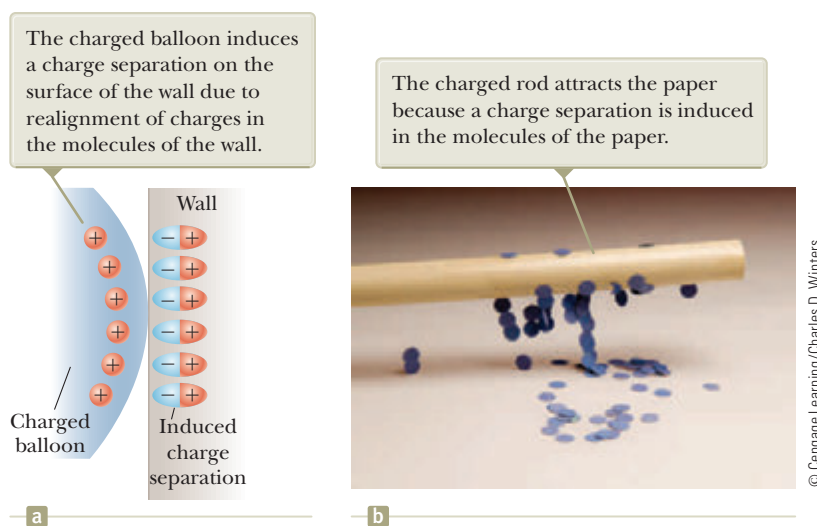


Figure 23.4 (a) A charged balloon is brought near an insulating wall. (b) A charged rod is brought close to bits of paper.

the side of the sphere near the rod with an effective positive charge because of the diminished number of electrons as in Figure 23.3b. (The left side of the sphere in Figure 23.3b is positively charged *as if* positive charges moved into this region, but remember that only electrons are free to move.) This process occurs even if the rod never actually touches the sphere. If the same experiment is performed with a conducting wire connected from the sphere to the Earth (Fig. 23.3c), some of the electrons in the conductor are so strongly repelled by the presence of the negative charge in the rod that they move out of the sphere through the wire and into the Earth. The symbol \equiv at the end of the wire in Figure 23.3c indicates that the wire is connected to **ground**, which means a reservoir, such as the Earth, that can accept or provide electrons freely with negligible effect on its electrical characteristics. If the wire to ground is then removed (Fig. 23.3d), the conducting sphere contains an excess of *induced* positive charge because it has fewer electrons than it needs to cancel out the positive charge of the protons. When the rubber rod is removed from the vicinity of the sphere (Fig. 23.3e), this induced positive charge remains on the ungrounded sphere. Notice that the rubber rod loses none of its negative charge during this process.

Charging an object by induction requires no contact with the object inducing the charge. That is in contrast to charging an object by rubbing (that is, by *conduction*), which does require contact between the two objects.

A process similar to induction in conductors takes place in insulators. In most neutral molecules, the center of positive charge coincides with the center of negative charge. In the presence of a charged object, however, these centers inside each molecule in an insulator may shift slightly, resulting in more positive charge on one side of the molecule than on the other. This realignment of charge within individual molecules produces a layer of charge on the surface of the insulator as shown in Figure 23.4a. The proximity of the positive charges on the surface of the object and the negative charges on the surface of the insulator results in an attractive force between the object and the insulator. Your knowledge of induction in insulators should help you explain why a charged rod attracts bits of electrically neutral paper as shown in Figure 23.4b.

- Quick Quiz 23.2** Three objects are brought close to one another, two at a time. When objects A and B are brought together, they attract. When objects B and C are brought together, they repel. Which of the following are necessarily true? (a) Objects A and C possess charges of the same sign. (b) Objects A and C possess charges of opposite sign. (c) All three objects possess charges of the same sign. (d) One object is neutral. (e) Additional experiments must be performed to determine information about the charges on the objects.

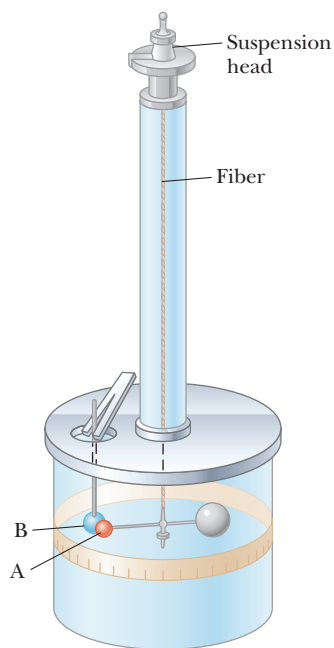


Figure 23.5 Coulomb's balance, used to establish the inverse-square law for the electric force.

23.3 Coulomb's Law

Charles Coulomb measured the magnitudes of the electric forces between charged objects using the torsion balance, which he invented (Fig. 23.5). The operating principle of the torsion balance is the same as that of the apparatus used by Cavendish to measure the density of the Earth (see Section 13.1), with the electrically neutral spheres replaced by charged ones. The electric force between charged spheres A and B in Figure 23.5 causes the spheres to either attract or repel each other, and the resulting motion causes the suspended fiber to twist. Because the restoring torque of the twisted fiber is proportional to the angle through which the fiber rotates, a measurement of this angle provides a quantitative measure of the electric force of attraction or repulsion. Once the spheres are charged by rubbing, the electric force between them is very large compared with the gravitational attraction, and so the gravitational force can be neglected.

From Coulomb's experiments, we can generalize the properties of the **electric force** (sometimes called the *electrostatic force*) between two stationary charged particles. We use the term **point charge** to refer to a charged particle of zero size. The electrical behavior of electrons and protons is very well described by modeling them as point charges. From experimental observations, we find that the magnitude of the electric force (sometimes called the *Coulomb force*) between two point charges is given by **Coulomb's law**.

Coulomb's law ▶

$$F_e = k_e \frac{|q_1||q_2|}{r^2} \quad (23.1)$$

where k_e is a constant called the **Coulomb constant**. In his experiments, Coulomb was able to show that the value of the exponent of r was 2 to within an uncertainty of a few percent. Modern experiments have shown that the exponent is 2 to within an uncertainty of a few parts in 10^{16} . Experiments also show that the electric force, like the gravitational force, is conservative.

The value of the Coulomb constant depends on the choice of units. The SI unit of charge is the **coulomb** (C). The Coulomb constant k_e in SI units has the value

Coulomb constant ▶

$$k_e = 8.987\,6 \times 10^9 \text{ N} \cdot \text{m}^2/\text{C}^2 \quad (23.2)$$

This constant is also written in the form

$$k_e = \frac{1}{4\pi\epsilon_0} \quad (23.3)$$


where the constant ϵ_0 (Greek letter epsilon) is known as the **permittivity of free space** and has the value

$$\epsilon_0 = 8.854\,2 \times 10^{-12} \text{ C}^2/\text{N} \cdot \text{m}^2 \quad (23.4)$$

The smallest unit of free charge e known in nature,² the charge on an electron ($-e$) or a proton ($+e$), has a magnitude

$$e = 1.602\,18 \times 10^{-19} \text{ C} \quad (23.5)$$

Therefore, 1 C of charge is approximately equal to the charge of 6.24×10^{18} electrons or protons. This number is very small when compared with the number of free electrons in 1 cm^3 of copper, which is on the order of 10^{23} . Nevertheless, 1 C is a substantial amount of charge. In typical experiments in which a rubber or glass rod is charged by friction, a net charge on the order of 10^{-6} C is obtained. In other



© INTERFOTO/Alamy

Charles Coulomb

French physicist (1736–1806)

Coulomb's major contributions to science were in the areas of electrostatics and magnetism. During his lifetime, he also investigated the strengths of materials, thereby contributing to the field of structural mechanics. In ergonomics, his research provided an understanding of the ways in which people and animals can best do work.

²No unit of charge smaller than e has been detected on a free particle; current theories, however, propose the existence of particles called *quarks* having charges $-e/3$ and $2e/3$. Although there is considerable experimental evidence for such particles inside nuclear matter, *free* quarks have never been detected. We discuss other properties of quarks in Chapter 46.

Table 23.1 Charge and Mass of the Electron, Proton, and Neutron

Particle	Charge (C)	Mass (kg)
Electron (e)	$-1.602\,176\,5 \times 10^{-19}$	$9.109\,4 \times 10^{-31}$
Proton (p)	$+1.602\,176\,5 \times 10^{-19}$	$1.672\,62 \times 10^{-27}$
Neutron (n)	0	$1.674\,93 \times 10^{-27}$

words, only a very small fraction of the total available charge is transferred between the rod and the rubbing material.

The charges and masses of the electron, proton, and neutron are given in Table 23.1. Notice that the electron and proton are identical in the magnitude of their charge but vastly different in mass. On the other hand, the proton and neutron are similar in mass but vastly different in charge. Chapter 46 will help us understand these interesting properties.

Example 23.1 The Hydrogen Atom

The electron and proton of a hydrogen atom are separated (on the average) by a distance of approximately 5.3×10^{-11} m. Find the magnitudes of the electric force and the gravitational force between the two particles.

SOLUTION

Conceptualize Think about the two particles separated by the very small distance given in the problem statement. In Chapter 13, we mentioned that the gravitational force between an electron and a proton is very small compared to the electric force between them, so we expect this to be the case with the results of this example.

Categorize The electric and gravitational forces will be evaluated from universal force laws, so we categorize this example as a substitution problem.

Use Coulomb's law to find the magnitude of the electric force:

$$F_e = k_e \frac{|e||-e|}{r^2} = (8.988 \times 10^9 \text{ N} \cdot \text{m}^2/\text{C}^2) \frac{(1.60 \times 10^{-19} \text{ C})^2}{(5.3 \times 10^{-11} \text{ m})^2}$$

$$= 8.2 \times 10^{-8} \text{ N}$$

Use Newton's law of universal gravitation and Table 23.1 (for the particle masses) to find the magnitude of the gravitational force:

$$F_g = G \frac{m_e m_p}{r^2}$$

$$= (6.674 \times 10^{-11} \text{ N} \cdot \text{m}^2/\text{kg}^2) \frac{(9.11 \times 10^{-31} \text{ kg})(1.67 \times 10^{-27} \text{ kg})}{(5.3 \times 10^{-11} \text{ m})^2}$$

$$= 3.6 \times 10^{-47} \text{ N}$$

The ratio $F_e/F_g \approx 2 \times 10^{39}$. Therefore, the gravitational force between charged atomic particles is negligible when compared with the electric force. Notice the similar forms of Newton's law of universal gravitation and Coulomb's law of electric forces. Other than the magnitude of the forces between elementary particles, what is a fundamental difference between the two forces?

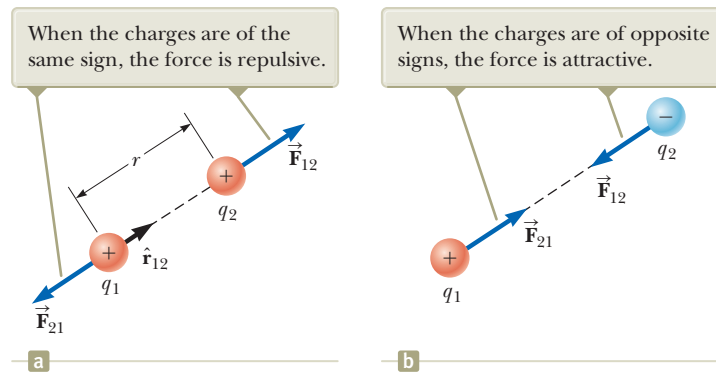
When dealing with Coulomb's law, remember that force is a vector quantity and must be treated accordingly. Coulomb's law expressed in vector form for the electric force exerted by a charge q_1 on a second charge q_2 , written $\vec{\mathbf{F}}_{12}$, is

$$\vec{\mathbf{F}}_{12} = k_e \frac{q_1 q_2}{r^2} \hat{\mathbf{r}}_{12} \quad (23.6)$$

◀ Vector form of Coulomb's law

where $\hat{\mathbf{r}}_{12}$ is a unit vector directed from q_1 toward q_2 as shown in Figure 23.6a (page 696). Because the electric force obeys Newton's third law, the electric force exerted by q_2 on q_1 is equal in magnitude to the force exerted by q_1 on q_2 and in the opposite direction; that is, $\vec{\mathbf{F}}_{21} = -\vec{\mathbf{F}}_{12}$. Finally, Equation 23.6 shows that if q_1 and q_2 have the

Figure 23.6 Two point charges separated by a distance r exert a force on each other that is given by Coulomb's law. The force \vec{F}_{21} exerted by q_2 on q_1 is equal in magnitude and opposite in direction to the force \vec{F}_{12} exerted by q_1 on q_2 .



same sign as in Figure 23.6a, the product q_1q_2 is positive and the electric force on one particle is directed away from the other particle. If q_1 and q_2 are of opposite sign as shown in Figure 23.6b, the product q_1q_2 is negative and the electric force on one particle is directed toward the other particle. These signs describe the *relative* direction of the force but not the *absolute* direction. A negative product indicates an attractive force, and a positive product indicates a repulsive force. The *absolute* direction of the force on a charge depends on the location of the other charge. For example, if an x axis lies along the two charges in Figure 23.6a, the product q_1q_2 is positive, but \vec{F}_{12} points in the positive x direction and \vec{F}_{21} points in the negative x direction.

When more than two charges are present, the force between any pair of them is given by Equation 23.6. Therefore, the resultant force on any one of them equals the vector sum of the forces exerted by the other individual charges. For example, if four charges are present, the resultant force exerted by particles 2, 3, and 4 on particle 1 is

$$\vec{F}_1 = \vec{F}_{21} + \vec{F}_{31} + \vec{F}_{41}$$

- Quick Quiz 23.3** Object A has a charge of $+2 \mu\text{C}$, and object B has a charge of $+6 \mu\text{C}$. Which statement is true about the electric forces on the objects?
- (a) $\vec{F}_{AB} = -3\vec{F}_{BA}$ (b) $\vec{F}_{AB} = -\vec{F}_{BA}$ (c) $3\vec{F}_{AB} = -\vec{F}_{BA}$ (d) $\vec{F}_{AB} = 3\vec{F}_{BA}$
 - (e) $\vec{F}_{AB} = \vec{F}_{BA}$ (f) $3\vec{F}_{AB} = \vec{F}_{BA}$

Example 23.2 Find the Resultant Force

Consider three point charges located at the corners of a right triangle as shown in Figure 23.7, where $q_1 = q_3 = 5.00 \mu\text{C}$, $q_2 = -2.00 \mu\text{C}$, and $a = 0.100 \text{ m}$. Find the resultant force exerted on q_3 .

SOLUTION

Conceptualize Think about the net force on q_3 . Because charge q_3 is near two other charges, it will experience two electric forces. These forces are exerted in different directions as shown in Figure 23.7. Based on the forces shown in the figure, estimate the direction of the net force vector.

Categorize Because two forces are exerted on charge q_3 , we categorize this example as a vector addition problem.

Analyze The directions of the individual forces exerted by q_1 and q_2 on q_3 are shown in Figure 23.7. The force \vec{F}_{23} exerted by q_2 on q_3 is attractive because q_2 and q_3 have opposite signs. In the coordinate system shown in Figure 23.7, the attractive force \vec{F}_{23} is to the left (in the negative x direction).

The force \vec{F}_{13} exerted by q_1 on q_3 is repulsive because both charges are positive. The repulsive force \vec{F}_{13} makes an angle of 45.0° with the x axis.

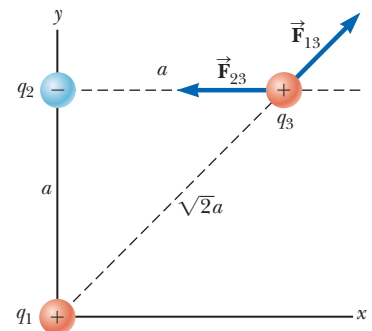


Figure 23.7 (Example 23.2) The force exerted by q_1 on q_3 is \vec{F}_{13} . The force exerted by q_2 on q_3 is \vec{F}_{23} . The resultant force \vec{F}_3 exerted on q_3 is the vector sum $\vec{F}_{13} + \vec{F}_{23}$.

23.2 continued

Use Equation 23.1 to find the magnitude of \vec{F}_{23} :

$$F_{23} = k_e \frac{|q_2||q_3|}{a^2} = (8.988 \times 10^9 \text{ N} \cdot \text{m}^2/\text{C}^2) \frac{(2.00 \times 10^{-6} \text{ C})(5.00 \times 10^{-6} \text{ C})}{(0.100 \text{ m})^2} = 8.99 \text{ N}$$

Find the magnitude of the force \vec{F}_{13} :

$$F_{13} = k_e \frac{|q_1||q_3|}{(\sqrt{2}a)^2} = (8.988 \times 10^9 \text{ N} \cdot \text{m}^2/\text{C}^2) \frac{(5.00 \times 10^{-6} \text{ C})(5.00 \times 10^{-6} \text{ C})}{2(0.100 \text{ m})^2} = 11.2 \text{ N}$$

Find the x and y components of the force \vec{F}_{13} :

$$F_{13x} = (11.2 \text{ N}) \cos 45.0^\circ = 7.94 \text{ N}$$

$$F_{13y} = (11.2 \text{ N}) \sin 45.0^\circ = 7.94 \text{ N}$$

Find the components of the resultant force acting on q_3 :

$$F_{3x} = F_{13x} + F_{23x} = 7.94 \text{ N} + (-8.99 \text{ N}) = -1.04 \text{ N}$$

$$F_{3y} = F_{13y} + F_{23y} = 7.94 \text{ N} + 0 = 7.94 \text{ N}$$

Express the resultant force acting on q_3 in unit-vector form:

$$\vec{F}_3 = (-1.04 \hat{i} + 7.94 \hat{j}) \text{ N}$$

Finalize The net force on q_3 is upward and toward the left in Figure 23.7. If q_3 moves in response to the net force, the distances between q_3 and the other charges change, so the net force changes. Therefore, if q_3 is free to move, it can be modeled as a particle under a net force as long as it is recognized that the force exerted on q_3 is *not* constant. As a reminder, we display most numerical values to three significant figures, which leads to operations such as $7.94 \text{ N} + (-8.99 \text{ N}) = -1.04 \text{ N}$ above. If you carry all intermediate results to more significant figures, you will see that this operation is correct.

WHAT IF? What if the signs of all three charges were changed to the opposite signs? How would that affect the result for \vec{F}_3 ?

Answer The charge q_3 would still be attracted toward q_2 and repelled from q_1 with forces of the same magnitude. Therefore, the final result for \vec{F}_3 would be the same.

Example 23.3 Where Is the Net Force Zero? AM

Three point charges lie along the x axis as shown in Figure 23.8. The positive charge $q_1 = 15.0 \mu\text{C}$ is at $x = 2.00 \text{ m}$, the positive charge $q_2 = 6.00 \mu\text{C}$ is at the origin, and the net force acting on q_3 is zero. What is the x coordinate of q_3 ?

SOLUTION

Conceptualize Because q_3 is near two other charges, it experiences two electric forces. Unlike the preceding example, however, the forces lie along the same line in this problem as indicated in Figure 23.8. Because q_3 is negative and q_1 and q_2 are positive, the forces \vec{F}_{13} and \vec{F}_{23} are both attractive. Because q_2 is the smaller charge, the position of q_3 at which the force is zero should be closer to q_2 than to q_1 .

Categorize Because the net force on q_3 is zero, we model the point charge as a *particle in equilibrium*.

Analyze Write an expression for the net force on charge q_3 when it is in equilibrium:

$$\vec{F}_3 = \vec{F}_{23} + \vec{F}_{13} = -k_e \frac{|q_2||q_3|}{x^2} \hat{i} + k_e \frac{|q_1||q_3|}{(2.00 - x)^2} \hat{i} = 0$$

Move the second term to the right side of the equation and set the coefficients of the unit vector \hat{i} equal:

$$k_e \frac{|q_2||q_3|}{x^2} = k_e \frac{|q_1||q_3|}{(2.00 - x)^2}$$

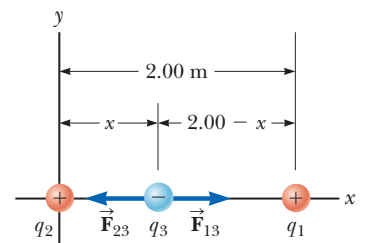


Figure 23.8 (Example 23.3) Three point charges are placed along the x axis. If the resultant force acting on q_3 is zero, the force \vec{F}_{13} exerted by q_1 on q_3 must be equal in magnitude and opposite in direction to the force \vec{F}_{23} exerted by q_2 on q_3 .

continued

23.3 continued

Eliminate k_e and $|q_3|$ and rearrange the equation:

$$(2.00 - x)^2 |q_2| = x^2 |q_1|$$

Take the square root of both sides of the equation:

$$(2.00 - x) \sqrt{|q_2|} = \pm x \sqrt{|q_1|}$$

Solve for x :

$$x = \frac{2.00 \sqrt{|q_2|}}{\sqrt{|q_2|} \pm \sqrt{|q_1|}}$$

Substitute numerical values, choosing the plus sign:

$$x = \frac{2.00 \sqrt{6.00 \times 10^{-6} \text{ C}}}{\sqrt{6.00 \times 10^{-6} \text{ C}} + \sqrt{15.0 \times 10^{-6} \text{ C}}} = 0.775 \text{ m}$$

Finalize Notice that the movable charge is indeed closer to q_2 as we predicted in the Conceptualize step. The second solution to the equation (if we choose the negative sign) is $x = -3.44 \text{ m}$. That is another location where the *magnitudes* of the forces on q_3 are equal, but both forces are in the same direction, so they do not cancel.

WHAT IF? Suppose q_3 is constrained to move only along the x axis. From its initial position at $x = 0.775 \text{ m}$, it is pulled a small distance along the x axis. When released, does it return to equilibrium, or is it pulled farther from equilibrium? That is, is the equilibrium stable or unstable?

Answer If q_3 is moved to the right, \vec{F}_{13} becomes larger and \vec{F}_{23} becomes smaller. The result is a net force to the right, in the same direction as the displacement. Therefore, the charge q_3 would continue to move to the right and the equilibrium is *unstable*. (See Section 7.9 for a review of stable and unstable equilibria.)

If q_3 is constrained to stay at a *fixed* x coordinate but allowed to move up and down in Figure 23.8, the equilibrium is stable. In this case, if the charge is pulled upward (or downward) and released, it moves back toward the equilibrium position and oscillates about this point.

Example 23.4 Find the Charge on the Spheres

AM

Two identical small charged spheres, each having a mass of $3.00 \times 10^{-2} \text{ kg}$, hang in equilibrium as shown in Figure 23.9a. The length L of each string is 0.150 m , and the angle θ is 5.00° . Find the magnitude of the charge on each sphere.

SOLUTION

Conceptualize Figure 23.9a helps us conceptualize this example. The two spheres exert repulsive forces on each other. If they are held close to each other and released, they move outward from the center and settle into the configuration in Figure 23.9a after the oscillations have vanished due to air resistance.

Categorize The key phrase “in equilibrium” helps us model each sphere as a *particle in equilibrium*. This example is similar to the particle in equilibrium problems in Chapter 5 with the added feature that one of the forces on a sphere is an electric force.

Analyze The force diagram for the left-hand sphere is shown in Figure 23.9b. The sphere is in equilibrium under the application of the force \vec{T} from the string, the electric force \vec{F}_e from the other sphere, and the gravitational force $m\vec{g}$.

From the particle in equilibrium model, set the net force on the left-hand sphere equal to zero for each component:

Divide Equation (1) by Equation (2) to find F_e :

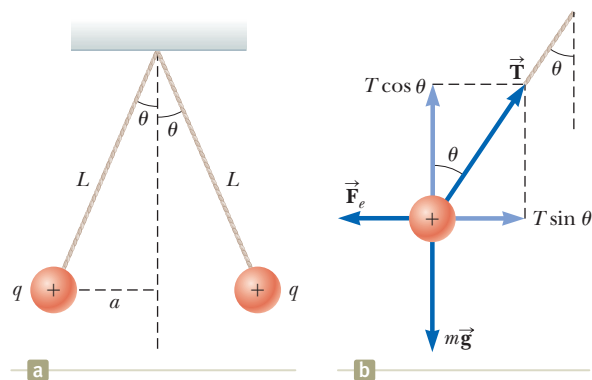


Figure 23.9 (Example 23.4) (a) Two identical spheres, each carrying the same charge q , suspended in equilibrium. (b) Diagram of the forces acting on the sphere on the left part of (a).

$$\begin{aligned} (1) \quad \sum F_x &= T \sin \theta - F_e = 0 \rightarrow T \sin \theta = F_e \\ (2) \quad \sum F_y &= T \cos \theta - mg = 0 \rightarrow T \cos \theta = mg \\ (3) \quad \tan \theta &= \frac{F_e}{mg} \rightarrow F_e = mg \tan \theta \end{aligned}$$

Use the geometry of the right triangle in Figure 23.9a to find a relationship between θ , ℓ , and x .

$$(4) \sin \theta = \frac{x}{\ell}$$

Solve Coulomb's law (Eq. 23.1) for the charge q on each sphere and substitute from Equations (3) and (4):

$$k \frac{q^2}{r^2} = mg \tan \theta$$

Substitute numerical values:

$$\frac{(3.00 \times 10^{-6} \text{ kg})(9.80 \text{ m/s}^2) \tan(5.00^\circ)}{(0.150 \text{ m} \sin(5.00^\circ))^2} = \frac{q^2}{\ell^2}$$

$$q = 4.42 \times 10^{-6} \text{ C}$$

Finalize If the sign of the charges were not given in Figure 23.9, we could not determine them. In fact, the sign of the charge is not important. The situation is the same whether both spheres are positively charged or negatively charged.

WHAT IF? Suppose your roommate proposes solving this problem without the assumption that the charges are of equal magnitude. She claims the symmetry of the problem is destroyed if the charges are not equal, so the strings would make two different angles with the vertical and the problem would be much more complicated. How would you respond?

Answer The symmetry is not destroyed and the angles are not different. Newton's third law requires the magnitudes of the electric forces on the two spheres to be the same, regardless of the equality or nonequality of the charges. The solution to the example remains the same with one change: the value of q in the solution is replaced by $\sqrt{q_1 q_2}$ in the new situation, where q_1 and q_2 are the values of the charges on the two spheres. The symmetry of the problem would be destroyed if the masses of the spheres were not the same. In this case, the strings would make different angles with the vertical and the problem would be more complicated.

23.4 Analysis Model: Particle in a Field (Electric)

In Section 5.1, we discussed the differences between contact forces and field forces. Two field forces—the gravitational force in Chapter 13 and the electric force here—have been introduced into our discussions so far. As pointed out earlier, field forces can act through space, producing an effect even when no physical contact occurs between interacting objects. Such an interaction can be modeled as a two-step process: a source particle establishes a field, and then a charged particle interacts with the field and experiences a force. The gravitational field \vec{g} at a point in space due to a source particle was defined in Section 13.4 to be equal to the gravitational force \vec{F}_g acting on a test particle of mass m divided by that mass: $\vec{g} = \vec{F}_g/m$. Then the force exerted by the field is $\vec{F} = m\vec{g}$ (Eq. 5.5).

The concept of a field was developed by Michael Faraday (1791–1867) in the context of electric forces and is of such practical value that we shall devote much attention to it in the next several chapters. In this approach, an **electric field** is said to exist in the region of space around a charged object, the **source charge**. The presence of the electric field can be detected by placing a **test charge** in the field and noting the electric force on it. As an example, consider Figure 23.10, which shows a small positive test charge q placed near a second object carrying a much greater positive charge Q . We define the electric field due to the source charge at the location of the test charge to be the electric force on the test charge *per unit charge*, or, to be more specific, the **electric field vector** \vec{E} at a point in space is defined as the electric force \vec{F} acting on a positive test charge q placed at that point divided by the test charge:

$$\vec{E} = \frac{\vec{F}}{q} \quad (23.7)$$

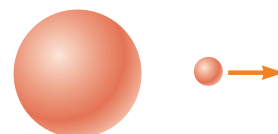



Figure 23.10 A small positive test charge q placed at point P near an object carrying a much larger positive charge Q experiences an electric field \vec{E} at point P established by the source charge Q . We will *always* assume that the test charge is so small that the field of the source charge is unaffected by its presence.

Definition of electric field

When using Equation 23.7, we must assume the test charge q is small enough that it does not disturb the charge distribution responsible for the electric field. If the test charge is great enough, the charge on the metallic sphere is redistributed and the electric field it sets up is different from the field it sets up in the presence of the much smaller test charge.



Courtesy: Johnny Autery

This dramatic photograph captures a lightning bolt striking a tree near some rural homes. Lightning is associated with very strong electric fields in the atmosphere.

The vector \vec{E} has the SI units of newtons per coulomb (N/C). The direction of \vec{E} as shown in Figure 23.10 is the direction of the force a positive test charge experiences when placed in the field. Note that \vec{E} is the field produced by some charge or charge distribution *separate from* the test charge; it is not the field produced by the test charge itself. Also note that the existence of an electric field is a property of its source; the presence of the test charge is not necessary for the field to exist. The test charge serves as a *detector* of the electric field: an electric field exists at a point if a test charge at that point experiences an electric force.

If an arbitrary charge q is placed in an electric field \vec{E} , it experiences an electric force given by

$$\vec{F}_e = q\vec{E} \quad (23.8)$$

This equation is the mathematical representation of the electric version of the **particle in a field** analysis model. If q is positive, the force is in the same direction as the field. If q is negative, the force and the field are in opposite directions. Notice the similarity between Equation 23.8 and the corresponding equation from the gravitational version of the particle in a field model, $\vec{F}_g = m\vec{g}$ (Section 5.5). Once the magnitude and direction of the electric field are known at some point, the electric force exerted on *any* charged particle placed at that point can be calculated from Equation 23.8.

To determine the direction of an electric field, consider a point charge q as a source charge. This charge creates an electric field at all points in space surrounding it. A test charge q_0 is placed at point P , a distance r from the source charge, as in Figure 23.11a. We imagine using the test charge to determine the direction of the electric force and therefore that of the electric field. According to Coulomb's law, the force exerted by q on the test charge is

$$\vec{F}_e = k_e \frac{qq_0}{r^2} \hat{r}$$

where \hat{r} is a unit vector directed from q toward q_0 . This force in Figure 23.11a is directed away from the source charge q . Because the electric field at P , the position of the test charge, is defined by $\vec{E} = \vec{F}_e/q_0$, the electric field at P created by q is

$$\vec{E} = k_e \frac{q}{r^2} \hat{r} \quad (23.9)$$

If the source charge q is positive, Figure 23.11b shows the situation with the test charge removed: the source charge sets up an electric field at P , directed away from q . If q is

Pitfall Prevention 23.1

Particles Only Equation 23.8 is valid only for a *particle* of charge q , that is, an object of zero size. For a charged *object* of finite size in an electric field, the field may vary in magnitude and direction over the size of the object, so the corresponding force equation may be more complicated.

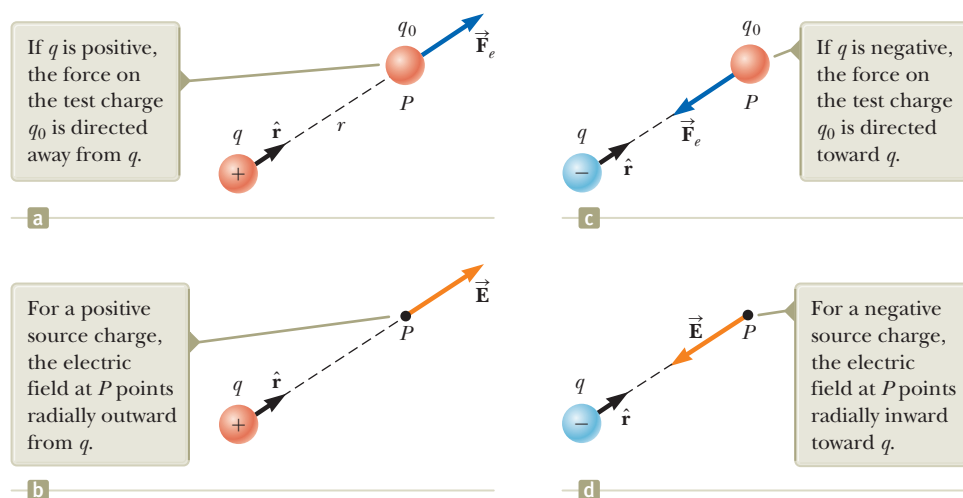


Figure 23.11 (a), (c) When a test charge q_0 is placed near a source charge q , the test charge experiences a force. (b), (d) At a point P near a source charge q , there exists an electric field.

negative as in Figure 23.11c, the force on the test charge is toward the source charge, so the electric field at P is directed toward the source charge as in Figure 23.11d.

To calculate the electric field at a point P due to a small number of point charges, we first calculate the electric field vectors at P individually using Equation 23.9 and then add them vectorially. In other words, at any point P , the total electric field due to a group of source charges equals the vector sum of the electric fields of all the charges. This superposition principle applied to fields follows directly from the vector addition of electric forces. Therefore, the electric field at point P due to a group of source charges can be expressed as the vector sum

$$\vec{\mathbf{E}} = k_e \sum_i \frac{q_i}{r_i^2} \hat{\mathbf{r}}_i \quad (23.10)$$

◀ Electric field due to a finite number of point charges

where r_i is the distance from the i th source charge q_i to the point P and $\hat{\mathbf{r}}_i$ is a unit vector directed from q_i toward P .

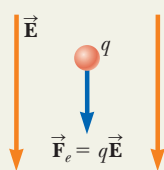
In Example 23.6, we explore the electric field due to two charges using the superposition principle. Part (B) of the example focuses on an **electric dipole**, which is defined as a positive charge q and a negative charge $-q$ separated by a distance $2a$. The electric dipole is a good model of many molecules, such as hydrochloric acid (HCl). Neutral atoms and molecules behave as dipoles when placed in an external electric field. Furthermore, many molecules, such as HCl, are permanent dipoles. The effect of such dipoles on the behavior of materials subjected to electric fields is discussed in Chapter 26.

- Quick Quiz 23.4** A test charge of $+3 \mu\text{C}$ is at a point P where an external electric field is directed to the right and has a magnitude of $4 \times 10^6 \text{ N/C}$. If the test charge is replaced with another test charge of $-3 \mu\text{C}$, what happens to the external electric field at P ? (a) It is unaffected. (b) It reverses direction. (c) It changes in a way that cannot be determined.

Analysis Model Particle in a Field (Electric)

Imagine an object with charge that we call a *source charge*. The source charge establishes an **electric field** $\vec{\mathbf{E}}$ throughout space. Now imagine a particle with charge q is placed in that field. The particle interacts with the electric field so that the particle experiences an electric force given by

$$\vec{\mathbf{F}}_e = q\vec{\mathbf{E}} \quad (23.8)$$



Examples:

- an electron moves between the deflection plates of a cathode ray oscilloscope and is deflected from its original path
- charged ions experience an electric force from the electric field in a velocity selector before entering a mass spectrometer (Chapter 29)
- an electron moves around the nucleus in the electric field established by the proton in a hydrogen atom as modeled by the Bohr theory (Chapter 42)
- a hole in a semiconducting material moves in response to the electric field established by applying a voltage to the material (Chapter 43)

Example 23.5 A Suspended Water Droplet AM

A water droplet of mass $3.00 \times 10^{-12} \text{ kg}$ is located in the air near the ground during a stormy day. An atmospheric electric field of magnitude $6.00 \times 10^3 \text{ N/C}$ points vertically downward in the vicinity of the water droplet. The droplet remains suspended at rest in the air. What is the electric charge on the droplet?

SOLUTION

Conceptualize Imagine the water droplet hovering at rest in the air. This situation is not what is normally observed, so something must be holding the water droplet up. *continued*

23.5 continued

Categorize The droplet can be modeled as a particle and is described by two analysis models associated with fields: the *particle in a field (gravitational)* and the *particle in a field (electric)*. Furthermore, because the droplet is subject to forces but remains at rest, it is also described by the *particle in equilibrium* model.

Analyze

Write Newton's second law from the particle in equilibrium model in the vertical direction:

$$(1) \quad \sum F_y = 0 \rightarrow F_e - F_g = 0$$

Using the two particle in a field models mentioned in the Categorize step, substitute for the forces in Equation (1), recognizing that the vertical component of the electric field is negative:

$$q(-E) - mg = 0$$

Solve for the charge on the water droplet:

$$q = -\frac{mg}{E}$$

Substitute numerical values:

$$q = -\frac{(3.00 \times 10^{-12} \text{ kg})(9.80 \text{ m/s}^2)}{6.00 \times 10^3 \text{ N/C}} = -4.90 \times 10^{-15} \text{ C}$$

Finalize Noting the smallest unit of free charge in Equation 23.5, the charge on the water droplet is a large number of these units. Notice that the electric *force* is upward to balance the downward gravitational force. The problem statement claims that the electric *field* is in the downward direction. Therefore, the charge found above is negative so that the electric force is in the direction opposite to the electric field.

Example 23.6 Electric Field Due to Two Charges

Charges q_1 and q_2 are located on the x axis, at distances a and b , respectively, from the origin as shown in Figure 23.12.

(A) Find the components of the net electric field at the point P , which is at position $(0, y)$.

SOLUTION

Conceptualize Compare this example with Example 23.2. There, we add vector forces to find the net force on a charged particle. Here, we add electric field vectors to find the net electric field at a point in space. If a charged particle were placed at P , we could use the particle in a field model to find the electric force on the particle.

Categorize We have two source charges and wish to find the resultant electric field, so we categorize this example as one in which we can use the superposition principle represented by Equation 23.10.

Analyze Find the magnitude of the electric field at P due to charge q_1 :

$$E_1 = k_e \frac{|q_1|}{r_1^2} = k_e \frac{|q_1|}{a^2 + y^2}$$

Find the magnitude of the electric field at P due to charge q_2 :

$$E_2 = k_e \frac{|q_2|}{r_2^2} = k_e \frac{|q_2|}{b^2 + y^2}$$

Write the electric field vectors for each charge in unit-vector form:

$$\vec{E}_1 = k_e \frac{|q_1|}{a^2 + y^2} \cos \phi \hat{i} + k_e \frac{|q_1|}{a^2 + y^2} \sin \phi \hat{j}$$

$$\vec{E}_2 = k_e \frac{|q_2|}{b^2 + y^2} \cos \theta \hat{i} - k_e \frac{|q_2|}{b^2 + y^2} \sin \theta \hat{j}$$

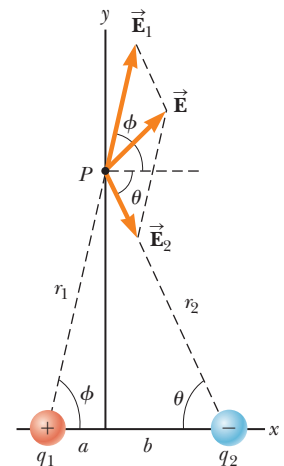


Figure 23.12 (Example 23.6) The total electric field \vec{E} at P equals the vector sum $\vec{E}_1 + \vec{E}_2$, where \vec{E}_1 is the field due to the positive charge q_1 and \vec{E}_2 is the field due to the negative charge q_2 .

23.6 continued

Write the components of the net electric field vector:

$$(1) \quad E_x = E_{1x} + E_{2x} = k_e \frac{|q_1|}{a^2 + y^2} \cos \phi + k_e \frac{|q_2|}{b^2 + y^2} \cos \theta$$

$$(2) \quad E_y = E_{1y} + E_{2y} = k_e \frac{|q_1|}{a^2 + y^2} \sin \phi - k_e \frac{|q_2|}{b^2 + y^2} \sin \theta$$

(B) Evaluate the electric field at point P in the special case that $|q_1| = |q_2|$ and $a = b$.

SOLUTION

Conceptualize Figure 23.13 shows the situation in this special case. Notice the symmetry in the situation and that the charge distribution is now an electric dipole.

Categorize Because Figure 23.13 is a special case of the general case shown in Figure 23.12, we can categorize this example as one in which we can take the result of part (A) and substitute the appropriate values of the variables.

Analyze Based on the symmetry in Figure 23.13, evaluate Equations (1) and (2) from part (A) with $a = b$, $|q_1| = |q_2| = q$, and $\phi = \theta$:

$$(3) \quad E_x = k_e \frac{q}{a^2 + y^2} \cos \theta + k_e \frac{q}{a^2 + y^2} \cos \theta = 2k_e \frac{q}{a^2 + y^2} \cos \theta$$

$$E_y = k_e \frac{q}{a^2 + y^2} \sin \theta - k_e \frac{q}{a^2 + y^2} \sin \theta = 0$$

From the geometry in Figure 23.13, evaluate $\cos \theta$:

$$(4) \quad \cos \theta = \frac{a}{r} = \frac{a}{(a^2 + y^2)^{1/2}}$$

Substitute Equation (4) into Equation (3):

$$E_x = 2k_e \frac{q}{a^2 + y^2} \left[\frac{a}{(a^2 + y^2)^{1/2}} \right] = k_e \frac{2aq}{(a^2 + y^2)^{3/2}}$$

(C) Find the electric field due to the electric dipole when point P is a distance $y \gg a$ from the origin.

SOLUTION

In the solution to part (B), because $y \gg a$, neglect a^2 compared with y^2 and write the expression for E in this case:

$$(5) \quad E \approx k_e \frac{2aq}{y^3}$$

Finalize From Equation (5), we see that at points far from a dipole but along the perpendicular bisector of the line joining the two charges, the magnitude of the electric field created by the dipole varies as $1/r^3$, whereas the more slowly varying field of a point charge varies as $1/r^2$ (see Eq. 23.9). That is because at distant points, the fields of the two charges of equal magnitude and opposite sign almost cancel each other. The $1/r^3$ variation in E for the dipole also is obtained for a distant point along the x axis and for any general distant point.

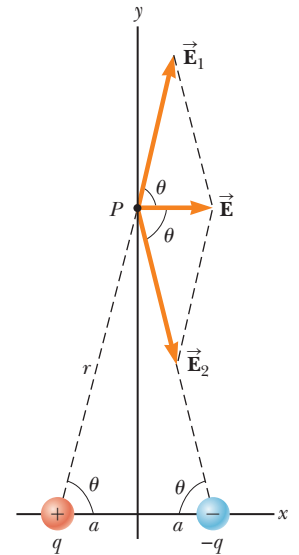


Figure 23.13 (Example 23.6) When the charges in Figure 23.12 are of equal magnitude and equidistant from the origin, the situation becomes symmetric as shown here.

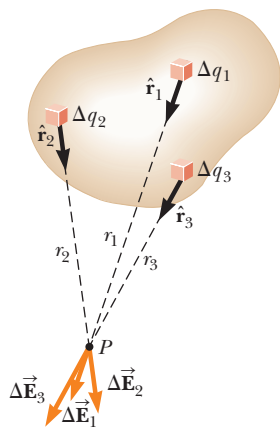


Figure 23.14 The electric field at P due to a continuous charge distribution is the vector sum of the fields $\Delta\vec{E}_i$ due to all the elements Δq_i of the charge distribution. Three sample elements are shown.

23.5 Electric Field of a Continuous Charge Distribution

Equation 23.10 is useful for calculating the electric field due to a small number of charges. In many cases, we have a continuous distribution of charge rather than a collection of discrete charges. The charge in these situations can be described as continuously distributed along some line, over some surface, or throughout some volume.

To set up the process for evaluating the electric field created by a continuous charge distribution, let's use the following procedure. First, divide the charge distribution into small elements, each of which contains a small charge Δq as shown in Figure 23.14. Next, use Equation 23.9 to calculate the electric field due to one of these elements at a point P . Finally, evaluate the total electric field at P due to the charge distribution by summing the contributions of all the charge elements (that is, by applying the superposition principle).

The electric field at P due to one charge element carrying charge Δq is

$$\Delta\vec{E} = k_e \frac{\Delta q}{r^2} \hat{r}$$

where r is the distance from the charge element to point P and \hat{r} is a unit vector directed from the element toward P . The total electric field at P due to all elements in the charge distribution is approximately

$$\vec{E} \approx k_e \sum_i \frac{\Delta q_i}{r_i^2} \hat{r}_i$$

where the index i refers to the i th element in the distribution. Because the number of elements is very large and the charge distribution is modeled as continuous, the total field at P in the limit $\Delta q_i \rightarrow 0$ is

$$\vec{E} = k_e \lim_{\Delta q_i \rightarrow 0} \sum_i \frac{\Delta q_i}{r_i^2} \hat{r}_i = k_e \int \frac{dq}{r^2} \hat{r} \quad (23.11)$$

where the integration is over the entire charge distribution. The integration in Equation 23.11 is a vector operation and must be treated appropriately.

Let's illustrate this type of calculation with several examples in which the charge is distributed on a line, on a surface, or throughout a volume. When performing such calculations, it is convenient to use the concept of a *charge density* along with the following notations:

- If a charge Q is uniformly distributed throughout a volume V , the **volume charge density** ρ is defined by

$$\rho \equiv \frac{Q}{V}$$

where ρ has units of coulombs per cubic meter (C/m^3).

- If a charge Q is uniformly distributed on a surface of area A , the **surface charge density** σ (Greek letter sigma) is defined by

$$\sigma \equiv \frac{Q}{A}$$

where σ has units of coulombs per square meter (C/m^2).

- If a charge Q is uniformly distributed along a line of length ℓ , the **linear charge density** λ is defined by

$$\lambda \equiv \frac{Q}{\ell}$$

where λ has units of coulombs per meter (C/m).

Electric field due to a continuous charge distribution ►

Volume charge density ►

Surface charge density ►

Linear charge density ►

- If the charge is nonuniformly distributed over a volume, surface, or line, the amounts of charge dq in a small volume, surface, or length element are

$$dq = \rho dV \quad dq = \sigma dA \quad dq = \lambda d\ell$$

Problem-Solving Strategy Calculating the Electric Field

The following procedure is recommended for solving problems that involve the determination of an electric field due to individual charges or a charge distribution.

1. Conceptualize. Establish a mental representation of the problem: think carefully about the individual charges or the charge distribution and imagine what type of electric field it would create. Appeal to any symmetry in the arrangement of charges to help you visualize the electric field.

2. Categorize. Are you analyzing a group of individual charges or a continuous charge distribution? The answer to this question tells you how to proceed in the Analyze step.

3. Analyze.

(a) If you are analyzing a group of individual charges, use the superposition principle: when several point charges are present, the resultant field at a point in space is the *vector sum* of the individual fields due to the individual charges (Eq. 23.10). Be very careful in the manipulation of vector quantities. It may be useful to review the material on vector addition in Chapter 3. Example 23.6 demonstrated this procedure.

(b) If you are analyzing a continuous charge distribution, the superposition principle is applied by replacing the vector sums for evaluating the total electric field from individual charges by vector integrals. The charge distribution is divided into infinitesimal pieces, and the vector sum is carried out by integrating over the entire charge distribution (Eq. 23.11). Examples 23.7 through 23.9 demonstrate such procedures.

Consider symmetry when dealing with either a distribution of point charges or a continuous charge distribution. Take advantage of any symmetry in the system you observed in the Conceptualize step to simplify your calculations. The cancellation of field components perpendicular to the axis in Example 23.8 is an example of the application of symmetry.

4. Finalize. Check to see if your electric field expression is consistent with the mental representation and if it reflects any symmetry that you noted previously. Imagine varying parameters such as the distance of the observation point from the charges or the radius of any circular objects to see if the mathematical result changes in a reasonable way.

Example 23.7 The Electric Field Due to a Charged Rod

A rod of length ℓ has a uniform positive charge per unit length λ and a total charge Q . Calculate the electric field at a point P that is located along the long axis of the rod and a distance a from one end (Fig. 23.15).

SOLUTION

Conceptualize The field $d\vec{E}$ at P due to each segment of charge on the rod is in the negative x direction because every segment carries a positive charge. Figure 23.15 shows the appropriate geometry. In our result, we expect the electric field to become smaller as the distance a becomes larger because point P is farther from the charge distribution.

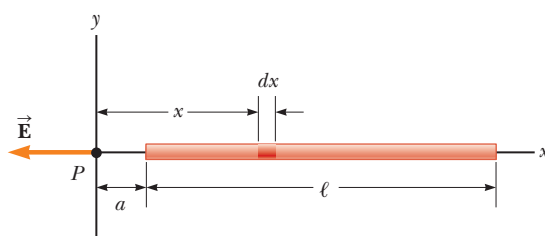


Figure 23.15 (Example 23.7) The electric field at P due to a uniformly charged rod lying along the x axis.

continued

23.7 continued

Categorize Because the rod is continuous, we are evaluating the field due to a continuous charge distribution rather than a group of individual charges. Because every segment of the rod produces an electric field in the negative x direction, the sum of their contributions can be handled without the need to add vectors.

Analyze Let's assume the rod is lying along the x axis, dx is the length of one small segment, and dq is the charge on that segment. Because the rod has a charge per unit length λ , the charge dq on the small segment is $dq = \lambda dx$.

Find the magnitude of the electric field at P due to one segment of the rod having a charge dq :

$$dE = k_e \frac{dq}{x^2} = k_e \frac{\lambda dx}{x^2}$$

Find the total field at P using⁴ Equation 23.11:

$$E = \int_a^{\ell+a} k_e \lambda \frac{dx}{x^2}$$

Noting that k_e and $\lambda = Q/\ell$ are constants and can be removed from the integral, evaluate the integral:

$$E = k_e \lambda \int_a^{\ell+a} \frac{dx}{x^2} = k_e \lambda \left[-\frac{1}{x} \right]_a^{\ell+a}$$

$$(1) \quad E = k_e \frac{Q}{\ell} \left(\frac{1}{a} - \frac{1}{\ell + a} \right) = \frac{k_e Q}{a(\ell + a)}$$

Finalize We see that our prediction is correct; if a becomes larger, the denominator of the fraction grows larger, and E becomes smaller. On the other hand, if $a \rightarrow 0$, which corresponds to sliding the bar to the left until its left end is at the origin, then $E \rightarrow \infty$. That represents the condition in which the observation point P is at zero distance from the charge at the end of the rod, so the field becomes infinite. We explore large values of a below.

WHAT IF? Suppose point P is very far away from the rod. What is the nature of the electric field at such a point?

Answer If P is far from the rod ($a \gg \ell$), then ℓ in the denominator of Equation (1) can be neglected and $E \approx k_e Q/a^2$. That is exactly the form you would expect for a point charge. Therefore, at large values of a/ℓ , the charge distribution appears to be a point charge of magnitude Q ; the point P is so far away from the rod we cannot distinguish that it has a size. The use of the limiting technique ($a/\ell \rightarrow \infty$) is often a good method for checking a mathematical expression.

Example 23.8 The Electric Field of a Uniform Ring of Charge

A ring of radius a carries a uniformly distributed positive total charge Q . Calculate the electric field due to the ring at a point P lying a distance x from its center along the central axis perpendicular to the plane of the ring (Fig. 23.16a).

SOLUTION

Conceptualize Figure 23.16a shows the electric field contribution $d\vec{E}$ at P due to a single segment of charge at the top of the ring. This field vector can be resolved into components dE_x parallel to

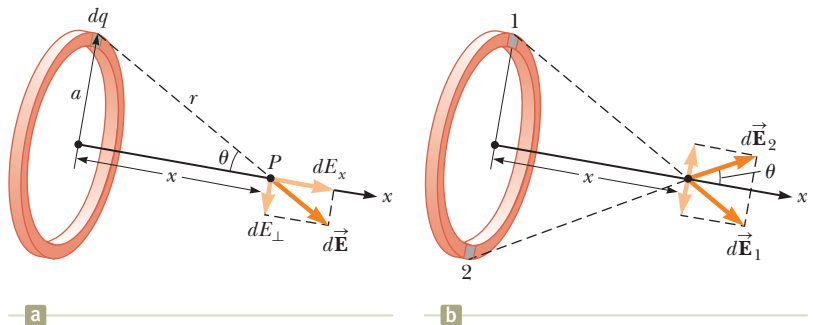


Figure 23.16 (Example 23.8) A uniformly charged ring of radius a . (a) The field at P on the x axis due to an element of charge dq . (b) The total electric field at P is along the x axis. The perpendicular component of the field at P due to segment 1 is canceled by the perpendicular component due to segment 2.

⁴To carry out integrations such as this one, first express the charge element dq in terms of the other variables in the integral. (In this example, there is one variable, x , so we made the change $dq = \lambda dx$.) The integral must be over scalar quantities; therefore, express the electric field in terms of components, if necessary. (In this example, the field has only an x component, so this detail is of no concern.) Then, reduce your expression to an integral over a single variable (or to multiple integrals, each over a single variable). In examples that have spherical or cylindrical symmetry, the single variable is a radial coordinate.

23.8 continued

the axis of the ring and dE_{\perp} perpendicular to the axis. Figure 23.16b shows the electric field contributions from two segments on opposite sides of the ring. Because of the symmetry of the situation, the perpendicular components of the field cancel. That is true for all pairs of segments around the ring, so we can ignore the perpendicular component of the field and focus solely on the parallel components, which simply add.

Categorize Because the ring is continuous, we are evaluating the field due to a continuous charge distribution rather than a group of individual charges.

Analyze Evaluate the parallel component of an electric field contribution from a segment of charge dq on the ring:

$$(1) \quad dE_x = k_e \frac{dq}{r^2} \cos \theta = k_e \frac{dq}{a^2 + x^2} \cos \theta$$

From the geometry in Figure 23.16a, evaluate $\cos \theta$:

$$(2) \quad \cos \theta = \frac{x}{r} = \frac{x}{(a^2 + x^2)^{1/2}}$$

Substitute Equation (2) into Equation (1):

$$dE_x = k_e \frac{dq}{a^2 + x^2} \left[\frac{x}{(a^2 + x^2)^{1/2}} \right] = \frac{k_e x}{(a^2 + x^2)^{3/2}} dq$$

All segments of the ring make the same contribution to the field at P because they are all equidistant from this point. Integrate over the circumference of the ring to obtain the total field at P :

$$E_x = \int \frac{k_e x}{(a^2 + x^2)^{3/2}} dq = \frac{k_e x}{(a^2 + x^2)^{3/2}} \int dq$$

$$(3) \quad E = \frac{k_e x}{(a^2 + x^2)^{3/2}} Q$$

Finalize This result shows that the field is zero at $x = 0$. Is that consistent with the symmetry in the problem? Furthermore, notice that Equation (3) reduces to $k_e Q/x^2$ if $x \gg a$, so the ring acts like a point charge for locations far away from the ring. From a faraway point, we cannot distinguish the ring shape of the charge.

WHAT IF? Suppose a negative charge is placed at the center of the ring in Figure 23.16 and displaced slightly by a distance $x \ll a$ along the x axis. When the charge is released, what type of motion does it exhibit?

Answer In the expression for the field due to a ring of charge, let $x \ll a$, which results in

$$E_x = \frac{k_e Q}{a^3} x$$

Therefore, from Equation 23.8, the force on a charge $-q$ placed near the center of the ring is

$$F_x = -\frac{k_e q Q}{a^3} x$$

Because this force has the form of Hooke's law (Eq. 15.1), the motion of the negative charge is described with the *particle in simple harmonic motion model!*

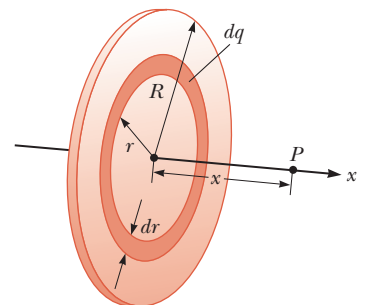
Example 23.9 The Electric Field of a Uniformly Charged Disk

A disk of radius R has a uniform surface charge density σ . Calculate the electric field at a point P that lies along the central perpendicular axis of the disk and a distance x from the center of the disk (Fig. 23.17).

SOLUTION

Conceptualize If the disk is considered to be a set of concentric rings, we can use our result from Example 23.8—which gives the field created by a single ring of radius a —and sum the contributions of all rings making up the disk. By symmetry, the field at an axial point must be along the central axis.

Figure 23.17 (Example 23.9) A uniformly charged disk of radius R . The electric field at an axial point P is directed along the central axis, perpendicular to the plane of the disk.



continued

23.9 continued

Categorize Because the disk is continuous, we are evaluating the field due to a continuous charge distribution rather than a group of individual charges.

Analyze Find the amount of charge dq on the surface area of a ring of radius r and width dr as shown in Figure 23.17:

$$dq = \sigma dA = \sigma(2\pi r dr) = 2\pi\sigma r dr$$

Use this result in the equation given for E_x in Example 23.8 (with a replaced by r and Q replaced by dq) to find the field due to the ring:

$$dE_x = \frac{k_e x}{(r^2 + x^2)^{3/2}} (2\pi\sigma r dr)$$

To obtain the total field at P , integrate this expression over the limits $r = 0$ to $r = R$, noting that x is a constant in this situation:

$$\begin{aligned} E_x &= k_e x \pi \sigma \int_0^R \frac{2r dr}{(r^2 + x^2)^{3/2}} \\ &= k_e x \pi \sigma \int_0^R (r^2 + x^2)^{-3/2} d(r^2) \end{aligned}$$

$$= k_e x \pi \sigma \left[\frac{(r^2 + x^2)^{-1/2}}{-1/2} \right]_0^R = 2\pi k_e \sigma \left[1 - \frac{x}{(R^2 + x^2)^{1/2}} \right]$$

Finalize This result is valid for all values of $x > 0$. For large values of x , the result above can be evaluated by a series expansion and shown to be equivalent to the electric field of a point charge Q . We can calculate the field close to the disk along the axis by assuming $x \ll R$; in this case, the expression in brackets reduces to unity to give us the near-field approximation

$$E = 2\pi k_e \sigma = \frac{\sigma}{2\epsilon_0}$$

where ϵ_0 is the permittivity of free space. In Chapter 24, we obtain the same result for the field created by an infinite plane of charge with uniform surface charge density.

WHAT IF? What if we let the radius of the disk grow so that the disk becomes an infinite plane of charge?

Answer The result of letting $R \rightarrow \infty$ in the final result of the example is that the magnitude of the electric field becomes

$$E = 2\pi k_e \sigma = \frac{\sigma}{2\epsilon_0}$$

This is the same expression that we obtained for $x \ll R$. If $R \rightarrow \infty$, *everywhere* is near-field—the result is independent of the position at which you measure the electric field. Therefore, the electric field due to an infinite plane of charge is uniform throughout space.

An infinite plane of charge is impossible in practice. If two planes of charge are placed close to each other, however, with one plane positively charged, and the other negatively, the electric field between the plates is very close to uniform at points far from the edges. Such a configuration will be investigated in Chapter 26.

23.6 Electric Field Lines

We have defined the electric field in the mathematical representation with Equation 23.7. Let's now explore a means of visualizing the electric field in a pictorial representation. A convenient way of visualizing electric field patterns is to draw lines, called **electric field lines** and first introduced by Faraday, that are related to the electric field in a region of space in the following manner:

- The electric field vector \vec{E} is tangent to the electric field line at each point. The line has a direction, indicated by an arrowhead, that is the same as that

of the electric field vector. The direction of the line is that of the force on a positive charge placed in the field according to the particle in a field model.

- The number of lines per unit area through a surface perpendicular to the lines is proportional to the magnitude of the electric field in that region. Therefore, the field lines are close together where the electric field is strong and far apart where the field is weak.

These properties are illustrated in Figure 23.18. The density of field lines through surface A is greater than the density of lines through surface B. Therefore, the magnitude of the electric field is larger on surface A than on surface B. Furthermore, because the lines at different locations point in different directions, the field is nonuniform.

Is this relationship between strength of the electric field and the density of field lines consistent with Equation 23.9, the expression we obtained for E using Coulomb's law? To answer this question, consider an imaginary spherical surface of radius r concentric with a point charge. From symmetry, we see that the magnitude of the electric field is the same everywhere on the surface of the sphere. The number of lines N that emerge from the charge is equal to the number that penetrate the spherical surface. Hence, the number of lines per unit area on the sphere is $N/4\pi r^2$ (where the surface area of the sphere is $4\pi r^2$). Because E is proportional to the number of lines per unit area, we see that E varies as $1/r^2$; this finding is consistent with Equation 23.9.

Representative electric field lines for the field due to a single positive point charge are shown in Figure 23.19a. This two-dimensional drawing shows only the field lines that lie in the plane containing the point charge. The lines are actually directed radially outward from the charge in all directions; therefore, instead of the flat "wheel" of lines shown, you should picture an entire spherical distribution of lines. Because a positive charge placed in this field would be repelled by the positive source charge, the lines are directed radially away from the source charge. The electric field lines representing the field due to a single negative point charge are directed toward the charge (Fig. 23.19b). In either case, the lines are along the radial direction and extend all the way to infinity. Notice that the lines become closer together as they approach the charge, indicating that the strength of the field increases as we move toward the source charge.

The rules for drawing electric field lines are as follows:

- The lines must begin on a positive charge and terminate on a negative charge. In the case of an excess of one type of charge, some lines will begin or end infinitely far away.

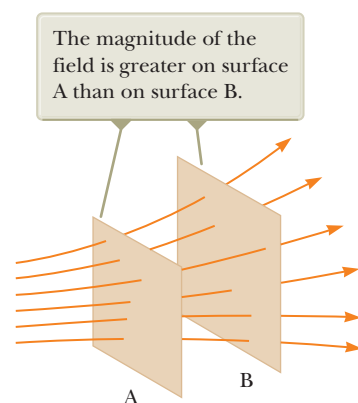
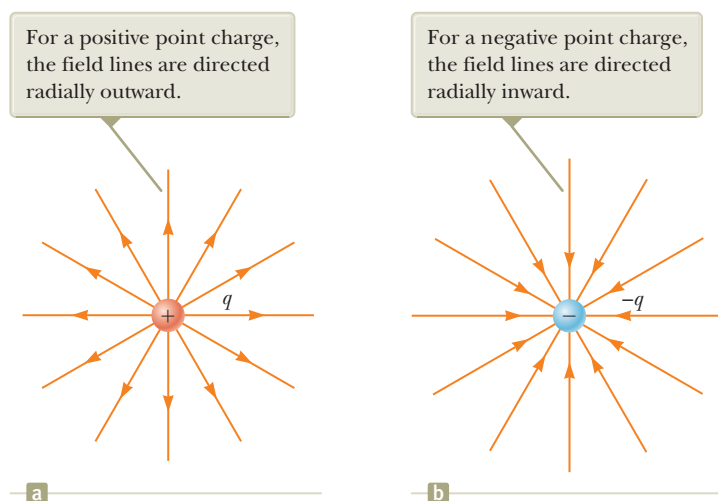


Figure 23.18 Electric field lines penetrating two surfaces.

Pitfall Prevention 23.2

Electric Field Lines Are Not Paths of Particles! Electric field lines represent the field at various locations. Except in very special cases, they *do not* represent the path of a charged particle moving in an electric field.

Figure 23.19 The electric field lines for a point charge. Notice that the figures show only those field lines that lie in the plane of the page.

Pitfall Prevention 23.3**Electric Field Lines Are Not Real**

Electric field lines are not material objects. They are used only as a pictorial representation to provide a qualitative description of the electric field. Only a finite number of lines from each charge can be drawn, which makes it appear as if the field were quantized and exists only in certain parts of space. The field, in fact, is continuous, existing at every point. You should avoid obtaining the wrong impression from a two-dimensional drawing of field lines used to describe a three-dimensional situation.

The number of field lines leaving the positive charge equals the number terminating at the negative charge.

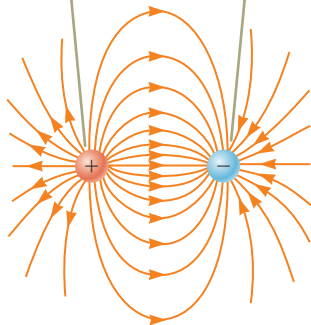


Figure 23.20 The electric field lines for two point charges of equal magnitude and opposite sign (an electric dipole).

- The number of lines drawn leaving a positive charge or approaching a negative charge is proportional to the magnitude of the charge.
- No two field lines can cross.

We choose the number of field lines starting from any object with a positive charge q_+ to be Cq_+ and the number of lines ending on any object with a negative charge q_- to be $C|q_-|$, where C is an arbitrary proportionality constant. Once C is chosen, the number of lines is fixed. For example, in a two-charge system, if object 1 has charge Q_1 and object 2 has charge Q_2 , the ratio of number of lines in contact with the charges is $N_2/N_1 = |Q_2/Q_1|$. The electric field lines for two point charges of equal magnitude but opposite signs (an electric dipole) are shown in Figure 23.20. Because the charges are of equal magnitude, the number of lines that begin at the positive charge must equal the number that terminate at the negative charge. At points very near the charges, the lines are nearly radial, as for a single isolated charge. The high density of lines between the charges indicates a region of strong electric field.

Figure 23.21 shows the electric field lines in the vicinity of two equal positive point charges. Again, the lines are nearly radial at points close to either charge, and the same number of lines emerges from each charge because the charges are equal in magnitude. Because there are no negative charges available, the electric field lines end infinitely far away. At great distances from the charges, the field is approximately equal to that of a single point charge of magnitude $2q$.

Finally, in Figure 23.22, we sketch the electric field lines associated with a positive charge $+2q$ and a negative charge $-q$. In this case, the number of lines leaving $+2q$ is twice the number terminating at $-q$. Hence, only half the lines that leave the positive charge reach the negative charge. The remaining half terminate on a negative charge we assume to be at infinity. At distances much greater than the charge separation, the electric field lines are equivalent to those of a single charge $+q$.

- Quick Quiz 23.5** Rank the magnitudes of the electric field at points A, B, and C shown in Figure 23.21 (greatest magnitude first).

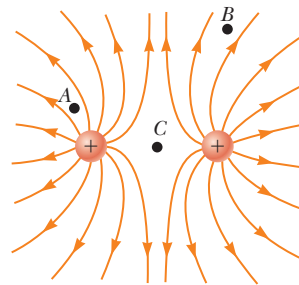


Figure 23.21 The electric field lines for two positive point charges. (The locations A, B, and C are discussed in Quick Quiz 23.5.)

Two field lines leave $+2q$ for every one that terminates on $-q$.

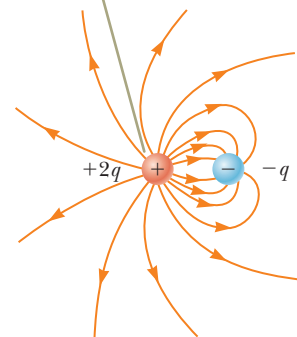


Figure 23.22 The electric field lines for a point charge $+2q$ and a second point charge $-q$.

23.7 Motion of a Charged Particle in a Uniform Electric Field

When a particle of charge q and mass m is placed in an electric field \vec{E} , the electric force exerted on the charge is $q\vec{E}$ according to Equation 23.8 in the particle in a

field model. If that is the only force exerted on the particle, it must be the net force, and it causes the particle to accelerate according to the particle under a net force model. Therefore,

$$\vec{\mathbf{F}}_e = q\vec{\mathbf{E}} = m\vec{\mathbf{a}}$$

and the acceleration of the particle is

$$\vec{\mathbf{a}} = \frac{q\vec{\mathbf{E}}}{m} \quad (23.12)$$

If $\vec{\mathbf{E}}$ is uniform (that is, constant in magnitude and direction), and the particle is free to move, the electric force on the particle is constant and we can apply the particle under constant acceleration model to the motion of the particle. Therefore, the particle in this situation is described by *three* analysis models: particle in a field, particle under a net force, and particle under constant acceleration! If the particle has a positive charge, its acceleration is in the direction of the electric field. If the particle has a negative charge, its acceleration is in the direction opposite the electric field.

Pitfall Prevention 23.4

Just Another Force Electric forces and fields may seem abstract to you. Once $\vec{\mathbf{F}}_e$ is evaluated, however, it causes a particle to move according to our well-established models of forces and motion from Chapters 2 through 6. Keeping this link with the past in mind should help you solve problems in this chapter.

Example 23.10 An Accelerating Positive Charge: Two Models AM

A uniform electric field $\vec{\mathbf{E}}$ is directed along the x axis between parallel plates of charge separated by a distance d as shown in Figure 23.23. A positive point charge q of mass m is released from rest at a point $\textcircled{\text{A}}$ next to the positive plate and accelerates to a point $\textcircled{\text{B}}$ next to the negative plate.

(A) Find the speed of the particle at $\textcircled{\text{B}}$ by modeling it as a particle under constant acceleration.

SOLUTION

Conceptualize When the positive charge is placed at $\textcircled{\text{A}}$, it experiences an electric force toward the right in Figure 23.23 due to the electric field directed toward the right. As a result, it will accelerate to the right and arrive at $\textcircled{\text{B}}$ with some speed.

Categorize Because the electric field is uniform, a constant electric force acts on the charge. Therefore, as suggested in the discussion preceding the example and in the problem statement, the point charge can be modeled as a *charged particle under constant acceleration*.

Analyze Use Equation 2.17 to express the velocity of the particle as a function of position:

$$v_f^2 = v_i^2 + 2a(x_f - x_i) = 0 + 2a(d - 0) = 2ad$$

Solve for v_f and substitute for the magnitude of the acceleration from Equation 23.12:

$$v_f = \sqrt{2ad} = \sqrt{2\left(\frac{qE}{m}\right)d} = \sqrt{\frac{2qEd}{m}}$$

(B) Find the speed of the particle at $\textcircled{\text{B}}$ by modeling it as a nonisolated system in terms of energy.

SOLUTION

Categorize The problem statement tells us that the charge is a *nonisolated system for energy*. The electric force, like any force, can do work on a system. Energy is transferred to the system of the charge by work done by the electric force exerted on the charge. The initial configuration of the system is when the particle is at rest at $\textcircled{\text{A}}$, and the final configuration is when it is moving with some speed at $\textcircled{\text{B}}$.

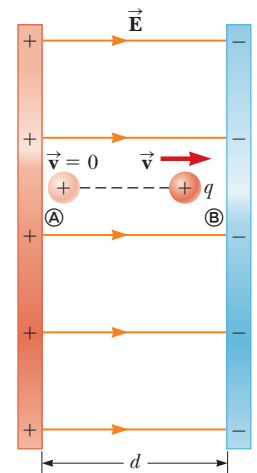


Figure 23.23 (Example 23.10) A positive point charge q in a uniform electric field $\vec{\mathbf{E}}$ undergoes constant acceleration in the direction of the field.

continued

23.10 continued

Analyze Write the appropriate reduction of the conservation of energy equation, Equation 8.2, for the system of the charged particle:

$$W = \Delta K$$

Replace the work and kinetic energies with values appropriate for this situation:

$$F_e \Delta x = K_{\text{Ⓢ}} - K_{\text{ⓐ}} = \frac{1}{2} m v_f^2 - 0 \rightarrow v_f = \sqrt{\frac{2F_e \Delta x}{m}}$$

Substitute for the magnitude of the electric force F_e from the particle in a field model and the displacement Δx :

$$v_f = \sqrt{\frac{2(qE)(d)}{m}} = \sqrt{\frac{2qEd}{m}}$$

Finalize The answer to part (B) is the same as that for part (A), as we expect. This problem can be solved with different approaches. We saw the same possibilities with mechanical problems.

Example 23.11 An Accelerated Electron AM

An electron enters the region of a uniform electric field as shown in Figure 23.24, with $v_i = 3.00 \times 10^6$ m/s and $E = 200$ N/C. The horizontal length of the plates is $\ell = 0.100$ m.

(A) Find the acceleration of the electron while it is in the electric field.

SOLUTION

Conceptualize This example differs from the preceding one because the velocity of the charged particle is initially perpendicular to the electric field lines. (In Example 23.10, the velocity of the charged particle is always parallel to the electric field lines.) As a result, the electron in this example follows a curved path as shown in Figure 23.24. The motion of the electron is the same as that of a massive particle projected horizontally in a gravitational field near the surface of the Earth.

Categorize The electron is a *particle in a field (electric)*. Because the electric field is uniform, a constant electric force is exerted on the electron. To find the acceleration of the electron, we can model it as a *particle under a net force*.

Analyze From the particle in a field model, we know that the direction of the electric force on the electron is downward in Figure 23.24, opposite the direction of the electric field lines. From the particle under a net force model, therefore, the acceleration of the electron is downward.

The particle under a net force model was used to develop Equation 23.12 in the case in which the electric force on a particle is the only force. Use this equation to evaluate the y component of the acceleration of the electron:

$$a_y = -\frac{eE}{m_e}$$

Substitute numerical values:

$$a_y = -\frac{(1.60 \times 10^{-19} \text{ C})(200 \text{ N/C})}{9.11 \times 10^{-31} \text{ kg}} = -3.51 \times 10^{13} \text{ m/s}^2$$

(B) Assuming the electron enters the field at time $t = 0$, find the time at which it leaves the field.

SOLUTION

Categorize Because the electric force acts only in the vertical direction in Figure 23.24, the motion of the particle in the horizontal direction can be analyzed by modeling it as a *particle under constant velocity*.

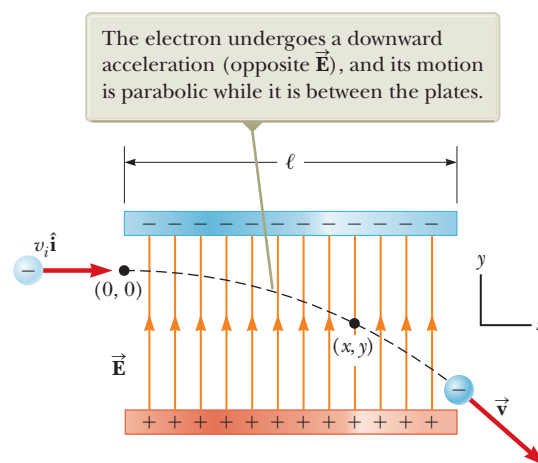


Figure 23.24 (Example 23.11) An electron is projected horizontally into a uniform electric field produced by two charged plates.

► 23.11 continued

Analyze Solve Equation 2.7 for the time at which the electron arrives at the right edges of the plates:

$$x_f = x_i + v_x t \rightarrow t = \frac{x_f - x_i}{v_x}$$

Substitute numerical values:

$$t = \frac{\ell - 0}{v_x} = \frac{0.100 \text{ m}}{3.00 \times 10^6 \text{ m/s}} = 3.33 \times 10^{-8} \text{ s}$$

(C) Assuming the vertical position of the electron as it enters the field is $y_i = 0$, what is its vertical position when it leaves the field?

SOLUTION

Categorize Because the electric force is constant in Figure 23.24, the motion of the particle in the vertical direction can be analyzed by modeling it as a *particle under constant acceleration*.

Analyze Use Equation 2.16 to describe the position of the particle at any time t :

$$y_f = y_i + v_{yi}t + \frac{1}{2}a_y t^2$$

Substitute numerical values:

$$\begin{aligned} y_f &= 0 + 0 + \frac{1}{2}(-3.51 \times 10^{13} \text{ m/s}^2)(3.33 \times 10^{-8} \text{ s})^2 \\ &= -0.0195 \text{ m} = -1.95 \text{ cm} \end{aligned}$$

Finalize If the electron enters just below the negative plate in Figure 23.24 and the separation between the plates is less than the value just calculated, the electron will strike the positive plate.

Notice that we have used *four* analysis models to describe the electron in the various parts of this problem. We have neglected the gravitational force acting on the electron, which represents a good approximation when dealing with atomic particles. For an electric field of 200 N/C, the ratio of the magnitude of the electric force eE to the magnitude of the gravitational force mg is on the order of 10^{12} for an electron and on the order of 10^9 for a proton.

Summary

Definitions

■ The **electric field** $\vec{\mathbf{E}}$ at some point in space is defined as the electric force $\vec{\mathbf{F}}_e$ that acts on a small positive test charge placed at that point divided by the magnitude q_0 of the test charge:

$$\vec{\mathbf{E}} \equiv \frac{\vec{\mathbf{F}}_e}{q_0} \quad (23.7)$$

Concepts and Principles

■ **Electric charges** have the following important properties:

- Charges of opposite sign attract one another, and charges of the same sign repel one another.
- The total charge in an isolated system is conserved.
- Charge is quantized.

■ **Conductors** are materials in which electrons move freely. **Insulators** are materials in which electrons do not move freely.

continued

Coulomb's law states that the electric force exerted by a point charge q_1 on a second point charge q_2 is

$$\vec{\mathbf{F}}_{12} = k_e \frac{q_1 q_2}{r^2} \hat{\mathbf{r}}_{12} \quad (23.6)$$

where r is the distance between the two charges and $\hat{\mathbf{r}}_{12}$ is a unit vector directed from q_1 toward q_2 . The constant k_e , which is called the **Coulomb constant**, has the value $k_e = 8.988 \times 10^9 \text{ N} \cdot \text{m}^2/\text{C}^2$.

The electric field due to a group of point charges can be obtained by using the superposition principle. That is, the total electric field at some point equals the vector sum of the electric fields of all the charges:

$$\vec{\mathbf{E}} = k_e \sum_i \frac{q_i}{r_i^2} \hat{\mathbf{r}}_i \quad (23.10)$$

At a distance r from a point charge q , the electric field due to the charge is

$$\vec{\mathbf{E}} = k_e \frac{q}{r^2} \hat{\mathbf{r}} \quad (23.9)$$

where $\hat{\mathbf{r}}$ is a unit vector directed from the charge toward the point in question. The electric field is directed radially outward from a positive charge and radially inward toward a negative charge.

The electric field at some point due to a continuous charge distribution is

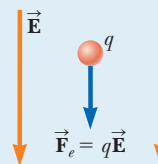
$$\vec{\mathbf{E}} = k_e \int \frac{dq}{r^2} \hat{\mathbf{r}} \quad (23.11)$$

where dq is the charge on one element of the charge distribution and r is the distance from the element to the point in question.

Analysis Models for Problem Solving

Particle in a Field (Electric) A source particle with some electric charge establishes an **electric field** $\vec{\mathbf{E}}$ throughout space. When a particle with charge q is placed in that field, it experiences an electric force given by

$$\vec{\mathbf{F}}_e = q\vec{\mathbf{E}} \quad (23.8)$$



Objective Questions

1. denotes answer available in *Student Solutions Manual/Study Guide*

- A free electron and a free proton are released in identical electric fields. (i) How do the magnitudes of the electric force exerted on the two particles compare? (a) It is millions of times greater for the electron. (b) It is thousands of times greater for the electron. (c) They are equal. (d) It is thousands of times smaller for the electron. (e) It is millions of times smaller for the electron. (ii) Compare the magnitudes of their accelerations. Choose from the same possibilities as in part (i).
- What prevents gravity from pulling you through the ground to the center of the Earth? Choose the best answer. (a) The density of matter is too great. (b) The positive nuclei of your body's atoms repel the positive nuclei of the atoms of the ground. (c) The density of the ground is greater than the density of your body. (d) Atoms are bound together by chemical bonds. (e) Electrons on the ground's surface and the surface of your feet repel one another.
- A very small ball has a mass of $5.00 \times 10^{-3} \text{ kg}$ and a charge of $4.00 \mu\text{C}$. What magnitude electric field directed upward will balance the weight of the ball so that the ball is suspended motionless above the ground? (a) $8.21 \times 10^2 \text{ N/C}$ (b) $1.22 \times 10^4 \text{ N/C}$ (c) $2.00 \times 10^{-2} \text{ N/C}$ (d) $5.11 \times 10^6 \text{ N/C}$ (e) $3.72 \times 10^3 \text{ N/C}$
- An electron with a speed of $3.00 \times 10^6 \text{ m/s}$ moves into a uniform electric field of magnitude $1.00 \times 10^3 \text{ N/C}$.

- The field lines are parallel to the electron's velocity and pointing in the same direction as the velocity. How far does the electron travel before it is brought to rest? (a) 2.56 cm (b) 5.12 cm (c) 11.2 cm (d) 3.34 m (e) 4.24 m
- A point charge of -4.00 nC is located at $(0, 1.00) \text{ m}$. What is the x component of the electric field due to the point charge at $(4.00, -2.00) \text{ m}$? (a) 1.15 N/C (b) -0.864 N/C (c) 1.44 N/C (d) -1.15 N/C (e) 0.864 N/C
- A circular ring of charge with radius b has total charge q uniformly distributed around it. What is the magnitude of the electric field at the center of the ring? (a) 0 (b) $k_e q/b^2$ (c) $k_e q^2/b^2$ (d) $k_e q^2/b$ (e) none of those answers
- What happens when a charged insulator is placed near an uncharged metallic object? (a) They repel each other. (b) They attract each other. (c) They may attract or repel each other, depending on whether the charge on the insulator is positive or negative. (d) They exert no electrostatic force on each other. (e) The charged insulator always spontaneously discharges.
- Estimate the magnitude of the electric field due to the proton in a hydrogen atom at a distance of $5.29 \times 10^{-11} \text{ m}$, the expected position of the electron in the atom. (a) 10^{-11} N/C (b) 10^8 N/C (c) 10^{14} N/C (d) 10^6 N/C (e) 10^{12} N/C

9. (i) A metallic coin is given a positive electric charge. Does its mass (a) increase measurably, (b) increase by an amount too small to measure directly, (c) remain unchanged, (d) decrease by an amount too small to measure directly, or (e) decrease measurably? (ii) Now the coin is given a negative electric charge. What happens to its mass? Choose from the same possibilities as in part (i).
10. Assume the charged objects in Figure OQ23.10 are fixed. Notice that there is no sight line from the location of q_2 to the location of q_1 . If you were at q_1 , you would be unable to see q_2 because it is behind q_3 . How would you calculate the electric force exerted on the object with charge q_1 ? (a) Find only the force exerted by q_2 on charge q_1 . (b) Find only the force exerted by q_3 on charge q_1 . (c) Add the force that q_2 would exert by itself on charge q_1 to the force that q_3 would exert by itself on charge q_1 . (d) Add the force that q_3 would exert by itself to a certain fraction of the force that q_2 would exert by itself. (e) There is no definite way to find the force on charge q_1 .

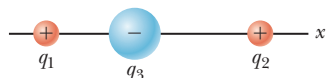


Figure OQ23.10

11. Three charged particles are arranged on corners of a square as shown in Figure OQ23.11, with charge $-Q$ on both the particle at the upper left corner and the particle at the lower right corner and with charge $+2Q$ on the particle at the lower left corner.

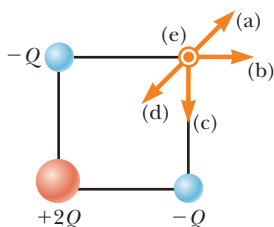


Figure OQ23.11

- (i) What is the direction of the electric field at the upper right corner, which is a point in empty space? (a) It is upward and to the right. (b) It is straight to the right. (c) It is straight downward. (d) It is downward and to the left. (e) It is perpendicular to the plane of the picture and outward. (ii) Suppose the $+2Q$ charge at the lower left corner is removed. Then does the magnitude of the field at the upper right corner (a) become larger, (b) become smaller, (c) stay the same, or (d) change unpredictably?

12. Two point charges attract each other with an electric force of magnitude F . If the charge on one of the particles is reduced to one-third its original value and the distance between the particles is doubled, what is the resulting magnitude of the electric force between them? (a) $\frac{1}{12}F$ (b) $\frac{1}{3}F$ (c) $\frac{1}{6}F$ (d) $\frac{3}{4}F$ (e) $\frac{3}{2}F$
13. Assume a uniformly charged ring of radius R and charge Q produces an electric field E_{ring} at a point P on its axis, at distance x away from the center of the ring as in Figure OQ23.13a. Now the same charge Q is spread uniformly over the circular area the ring encloses, forming a flat disk of charge with the same radius as in Figure OQ23.13b. How does the field E_{disk} produced by the disk at P compare with the field produced by the ring at the same point? (a) $E_{\text{disk}} < E_{\text{ring}}$ (b) $E_{\text{disk}} = E_{\text{ring}}$ (c) $E_{\text{disk}} > E_{\text{ring}}$ (d) impossible to determine

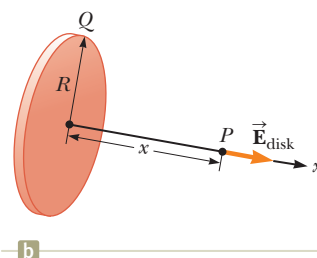
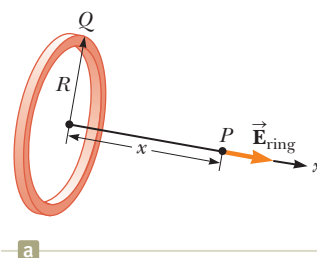


Figure OQ23.13

14. An object with negative charge is placed in a region of space where the electric field is directed vertically upward. What is the direction of the electric force exerted on this charge? (a) It is up. (b) It is down. (c) There is no force. (d) The force can be in any direction.
15. The magnitude of the electric force between two protons is 2.30×10^{-26} N. How far apart are they? (a) 0.100 m (b) 0.0220 m (c) 3.10 m (d) 0.00570 m (e) 0.480 m

Conceptual Questions

1. denotes answer available in *Student Solutions Manual/Study Guide*

- 1.** (a) Would life be different if the electron were positively charged and the proton were negatively charged? (b) Does the choice of signs have any bearing on physical and chemical interactions? Explain your answers.
2. A charged comb often attracts small bits of dry paper that then fly away when they touch the comb. Explain why that occurs.
3. A person is placed in a large, hollow, metallic sphere that is insulated from ground. If a large charge is placed

on the sphere, will the person be harmed upon touching the inside of the sphere?

4. A student who grew up in a tropical country and is studying in the United States may have no experience with static electricity sparks and shocks until his or her first American winter. Explain.
5. If a suspended object A is attracted to a charged object B, can we conclude that A is charged? Explain.

6. Consider point A in Figure CQ23.6 located an arbitrary distance from two positive point charges in otherwise empty space. (a) Is it possible for an electric field to exist at point A in empty space? Explain. (b) Does charge exist at this point? Explain. (c) Does a force exist at this point? Explain.

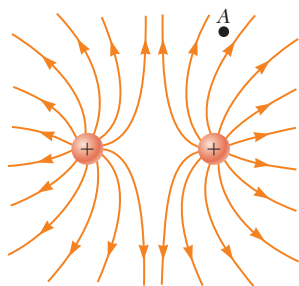


Figure CQ23.6

7. In fair weather, there is an electric field at the surface of the Earth, pointing down into the ground. What is the sign of the electric charge on the ground in this situation?

8. Why must hospital personnel wear special conducting shoes while working around oxygen in an operating room? What might happen if the personnel wore shoes with rubber soles?

9. A balloon clings to a wall after it is negatively charged by rubbing. (a) Does that occur because the wall is positively charged? (b) Why does the balloon eventually fall?

10. Consider two electric dipoles in empty space. Each dipole has zero net charge. (a) Does an electric force exist between the dipoles; that is, can two objects with zero net charge exert electric forces on each other? (b) If so, is the force one of attraction or of repulsion?

11. A glass object receives a positive charge by rubbing it with a silk cloth. In the rubbing process, have protons been added to the object or have electrons been removed from it?

Problems

WebAssign The problems found in this chapter may be assigned online in Enhanced WebAssign

1. straightforward; 2. intermediate; 3. challenging

1. full solution available in the *Student Solutions Manual/Study Guide*

AMT Analysis Model tutorial available in Enhanced WebAssign

GP Guided Problem

M Master It tutorial available in Enhanced WebAssign

W Watch It video solution available in Enhanced WebAssign

Section 23.1 Properties of Electric Charges

1. Find to three significant digits the charge and the mass of the following particles. *Suggestion:* Begin by looking up the mass of a neutral atom on the periodic table of the elements in Appendix C. (a) an ionized hydrogen atom, represented as H^+ (b) a singly ionized sodium atom, Na^+ (c) a chloride ion Cl^- (d) a doubly ionized calcium atom, $Ca^{++} = Ca^{2+}$ (e) the center of an ammonia molecule, modeled as an N^{3-} ion (f) quadruply ionized nitrogen atoms, N^{4+} , found in plasma in a hot star (g) the nucleus of a nitrogen atom (h) the molecular ion H_2O^-
2. (a) Calculate the number of electrons in a small, electrically neutral silver pin that has a mass of 10.0 g. Silver has 47 electrons per atom, and its molar mass is 107.87 g/mol. (b) Imagine adding electrons to the pin until the negative charge has the very large value 1.00 mC. How many electrons are added for every 10^9 electrons already present?

Section 23.2 Charging Objects by Induction

Section 23.3 Coulomb's Law

3. Two protons in an atomic nucleus are typically separated by a distance of 2×10^{-15} m. The electric repulsive force between the protons is huge, but the attractive nuclear force is even stronger and keeps the nucleus from bursting apart. What is the magnitude of the electric force between two protons separated by 2.00×10^{-15} m?

4. A charged particle A exerts a force of $2.62 \mu N$ to the right on charged particle B when the particles are 13.7 mm apart. Particle B moves straight away from A to make the distance between them 17.7 mm. What vector force does it then exert on A ?

5. In a thundercloud, there may be electric charges of $+40.0$ C near the top of the cloud and -40.0 C near the bottom of the cloud. These charges are separated by 2.00 km. What is the electric force on the top charge?

6. (a) Find the magnitude of the electric force between a Na^+ ion and a Cl^- ion separated by 0.50 nm. (b) Would the answer change if the sodium ion were replaced by Li^+ and the chloride ion by Br^- ? Explain.

7. **Review.** A molecule of DNA (deoxyribonucleic acid) is $2.17 \mu m$ long. The ends of the molecule become singly ionized: negative on one end, positive on the other. The helical molecule acts like a spring and compresses 1.00% upon becoming charged. Determine the effective spring constant of the molecule.

8. Nobel laureate Richard Feynman (1918–1988) once said that if two persons stood at arm's length from each other and each person had 1% more electrons than protons, the force of repulsion between them would be enough to lift a "weight" equal to that of the entire Earth. Carry out an order-of-magnitude calculation to substantiate this assertion.

9. A 7.50-nC point charge is located 1.80 m from a 4.20-nC point charge. (a) Find the magnitude of the

electric force that one particle exerts on the other.
(b) Is the force attractive or repulsive?

- 10.** (a) Two protons in a molecule are 3.80×10^{-10} m apart. Find the magnitude of the electric force exerted by one proton on the other. (b) State how the magnitude of this force compares with the magnitude of the gravitational force exerted by one proton on the other. (c) **What If?** What must be a particle's charge-to-mass ratio if the magnitude of the gravitational force between two of these particles is equal to the magnitude of electric force between them?

- 11.** Three point charges are arranged as shown in Figure P23.11. Find (a) the magnitude and (b) the direction of the electric force on the particle at the origin.

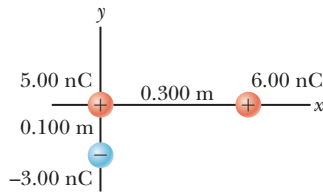


Figure P23.11 Problems 11 and 35.

- 12.** Three point charges lie along a straight line as shown in Figure P23.12, where $q_1 = 6.00 \mu\text{C}$, $q_2 = 1.50 \mu\text{C}$, and $q_3 = -2.00 \mu\text{C}$. The separation distances are $d_1 = 3.00$ cm and $d_2 = 2.00$ cm. Calculate the magnitude and direction of the net electric force on (a) q_1 , (b) q_2 , and (c) q_3 .

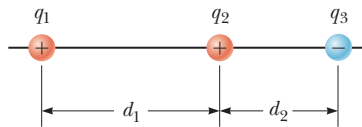


Figure P23.12

- 13.** Two small beads having positive charges $q_1 = 3q$ and $q_2 = q$ are fixed at the opposite ends of a horizontal insulating rod of length $d = 1.50$ m. The bead with charge q_1 is at the origin. As shown in Figure P23.13, a third small, charged bead is free to slide on the rod. (a) At what position x is the third bead in equilibrium? (b) Can the equilibrium be stable?

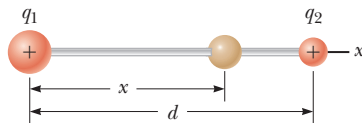


Figure P23.13 Problems 13 and 14.

- 14.** Two small beads having charges q_1 and q_2 of the same sign are fixed at the opposite ends of a horizontal insulating rod of length d . The bead with charge q_1 is at the origin. As shown in Figure P23.13, a third small, charged bead is free to slide on the rod. (a) At what position x is the third bead in equilibrium? (b) Can the equilibrium be stable?

- 15.** Three charged particles are located at the corners of an equilateral triangle as shown in Figure P23.15. Calculate the total electric force on the $7.00\text{-}\mu\text{C}$ charge.

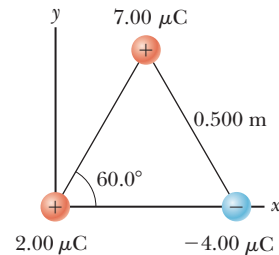


Figure P23.15 Problems 15 and 30.

- 16.** Two small metallic spheres, each of mass $m = 0.200$ g, are suspended as pendulums by light strings of length L as shown in Figure P23.16. The spheres are given the same electric charge of 7.2 nC, and they come to equilibrium when each string is at an angle of $\theta = 5.00^\circ$ with the vertical. How long are the strings?

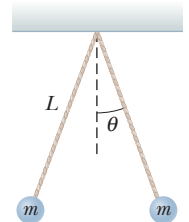


Figure P23.16

- 17. Review.** In the Bohr theory of the hydrogen atom, an electron moves in a circular orbit about a proton, where the radius of the orbit is 5.29×10^{-11} m. (a) Find the magnitude of the electric force exerted on each particle. (b) If this force causes the centripetal acceleration of the electron, what is the speed of the electron?
- 18. GP** Particle A of charge 3.00×10^{-4} C is at the origin, particle B of charge -6.00×10^{-4} C is at $(4.00 \text{ m}, 0)$, and particle C of charge 1.00×10^{-4} C is at $(0, 3.00 \text{ m})$. We wish to find the net electric force on C. (a) What is the x component of the electric force exerted by A on C? (b) What is the y component of the force exerted by A on C? (c) Find the magnitude of the force exerted by B on C. (d) Calculate the x component of the force exerted by B on C. (e) Calculate the y component of the force exerted by B on C. (f) Sum the two x components from parts (a) and (d) to obtain the resultant x component of the electric force acting on C. (g) Similarly, find the y component of the resultant force vector acting on C. (h) Find the magnitude and direction of the resultant electric force acting on C.

- 19.** A point charge $+2Q$ is at the origin and a point charge $-Q$ is located along the x axis at $x = d$ as in Figure P23.19. Find a symbolic expression for the net force on a third point charge $+Q$ located along the y axis at $y = d$.

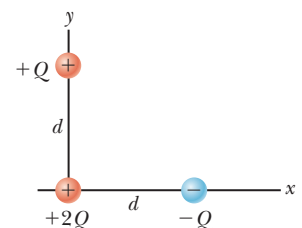


Figure P23.19

- 20. Review.** Two identical particles, each having charge $+q$, are fixed in space and separated by a distance d . A third particle with charge $-Q$ is free to move and lies initially at rest on the

perpendicular bisector of the two fixed charges a distance x from the midpoint between those charges (Fig. P23.20). (a) Show that if x is small compared with d , the motion of $-Q$ is simple harmonic along the perpendicular bisector. (b) Determine the period of that motion. (c) How fast will the charge $-Q$ be moving when it is at the midpoint between the two fixed charges if initially it is released at a distance $a \ll d$ from the midpoint?

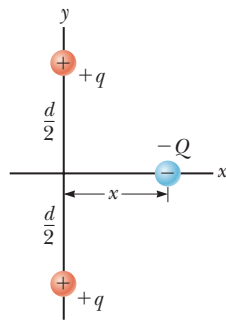


Figure P23.20

- 21.** Two identical conducting small spheres are placed with their centers 0.300 m apart. One is given a charge of 12.0 nC and the other a charge of -18.0 nC. (a) Find the electric force exerted by one sphere on the other. (b) **What If?** The spheres are connected by a conducting wire. Find the electric force each exerts on the other after they have come to equilibrium.
- 22.** Why is the following situation impossible? Two identical dust particles of mass $1.00 \mu\text{g}$ are floating in empty space, far from any external sources of large gravitational or electric fields, and at rest with respect to each other. Both particles carry electric charges that are identical in magnitude and sign. The gravitational and electric forces between the particles happen to have the same magnitude, so each particle experiences zero net force and the distance between the particles remains constant.

Section 23.4 Analysis Model: Particle in a Field (Electric)

- 23.** What are the magnitude and direction of the electric field that will balance the weight of (a) an electron and (b) a proton? (You may use the data in Table 23.1.)
- 24.** A small object of mass 3.80 g and charge $-18.0 \mu\text{C}$ is suspended motionless above the ground when immersed in a uniform electric field perpendicular to the ground. What are the magnitude and direction of the electric field?
- 25.** Four charged particles are at the corners of a square of side a as shown in Figure P23.25. Determine (a) the electric field at the location of charge q and (b) the total electric force exerted on q .

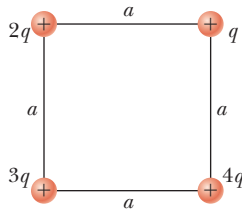


Figure P23.25

- 26.** Three point charges lie along a circle of radius r at angles of 30° , 150° , and 270° as shown in Figure P23.26. Find a symbolic expression for the resultant electric field at the center of the circle.

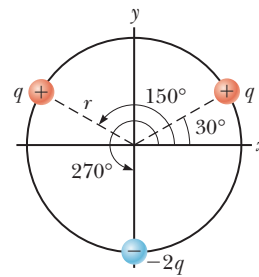


Figure P23.26

- 27.** Two equal positively charged particles are at opposite corners of a trapezoid as shown in Figure P23.27. Find symbolic expressions for the total electric field at (a) the point P and (b) the point P' .

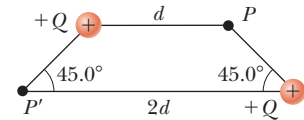


Figure P23.27

- 28.** Consider n equal positively charged particles each of magnitude Q/n placed symmetrically around a circle of radius a . (a) Calculate the magnitude of the electric field at a point a distance x from the center of the circle and on the line passing through the center and perpendicular to the plane of the circle. (b) Explain why this result is identical to the result of the calculation done in Example 23.8.

- 29.** In Figure P23.29, determine the point (other than infinity) at which the electric field is zero.

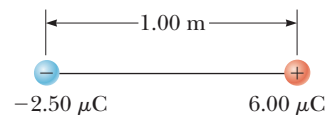


Figure P23.29

- 30.** Three charged particles are at the corners of an equilateral triangle as shown in Figure P23.15. (a) Calculate the electric field at the position of the $2.00\text{-}\mu\text{C}$ charge due to the $7.00\text{-}\mu\text{C}$ and $-4.00\text{-}\mu\text{C}$ charges. (b) Use your answer to part (a) to determine the force on the $2.00\text{-}\mu\text{C}$ charge.
- 31.** Three point charges are located on a circular arc as shown in Figure P23.31. (a) What is the total electric field at P , the center of the arc? (b) Find the electric force that would be exerted on a -5.00-nC point charge placed at P .

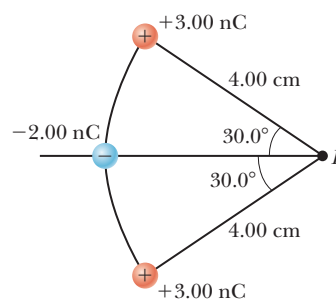


Figure P23.31

32. Two charged particles are located on the x -axis. The first is a charge $+Q$ at $x = -a$. The second is an unknown charge located at $x = +3a$. The net electric field these charges produce at the origin has a magnitude of $2k_e Q/a^2$. Explain how many values are possible for the unknown charge and find the possible values.
33. A small, 2.00-g plastic ball is suspended by a 20.0-cm-long string in a uniform electric field as shown in Figure P23.33. If the ball is in equilibrium when the string makes a 15.0° angle with the vertical, what is the net charge on the ball?

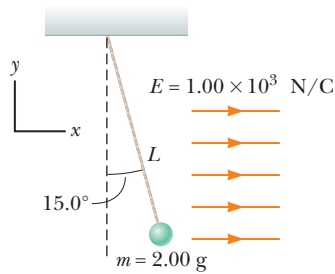


Figure P23.33

34. Two $2.00\text{-}\mu\text{C}$ point charges are located on the x axis. One is at $x = 1.00$ m, and the other is at $x = -1.00$ m. (a) Determine the electric field on the y axis at $y = 0.500$ m. (b) Calculate the electric force on a $-3.00\text{-}\mu\text{C}$ charge placed on the y axis at $y = 0.500$ m.
35. Three point charges are arranged as shown in Figure P23.11. (a) Find the vector electric field that the 6.00-nC and -3.00-nC charges together create at the origin. (b) Find the vector force on the 5.00-nC charge.
36. Consider the electric dipole shown in Figure P23.36. Show that the electric field at a distant point on the $+x$ axis is $E_x \approx 4k_e qa/x^3$.

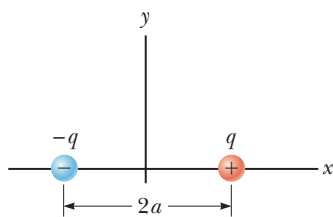


Figure P23.36

Section 23.5 Electric Field of a Continuous Charge Distribution

37. A rod 14.0 cm long is uniformly charged and has a total charge of $-22.0\text{ }\mu\text{C}$. Determine (a) the magnitude and (b) the direction of the electric field along the axis of the rod at a point 36.0 cm from its center.
38. A uniformly charged disk of radius 35.0 cm carries charge with a density of $7.90 \times 10^{-3}\text{ C/m}^2$. Calculate the electric field on the axis of the disk at (a) 5.00 cm, (b) 10.0 cm, (c) 50.0 cm, and (d) 200 cm from the center of the disk.
39. A uniformly charged ring of radius 10.0 cm has a total charge of $75.0\text{ }\mu\text{C}$. Find the electric field on the axis of

the ring at (a) 1.00 cm, (b) 5.00 cm, (c) 30.0 cm, and (d) 100 cm from the center of the ring.

40. The electric field along the axis of a uniformly charged disk of radius R and total charge Q was calculated in Example 23.9. Show that the electric field at distances x that are large compared with R approaches that of a particle with charge $Q = \sigma\pi R^2$. *Suggestion:* First show that $x/(x^2 + R^2)^{1/2} = (1 + R^2/x^2)^{-1/2}$ and use the binomial expansion $(1 + \delta)^n \approx 1 + n\delta$, when $\delta \ll 1$.
41. Example 23.9 derives the exact expression for the electric field at a point on the axis of a uniformly charged disk. Consider a disk of radius $R = 3.00$ cm having a uniformly distributed charge of $+5.20\text{ }\mu\text{C}$. (a) Using the result of Example 23.9, compute the electric field at a point on the axis and 3.00 mm from the center. (b) **What If?** Explain how the answer to part (a) compares with the field computed from the near-field approximation $E = \sigma/2\epsilon_0$. (We derived this expression in Example 23.9.) (c) Using the result of Example 23.9, compute the electric field at a point on the axis and 30.0 cm from the center of the disk. (d) **What If?** Explain how the answer to part (c) compares with the electric field obtained by treating the disk as a $+5.20\text{-}\mu\text{C}$ charged particle at a distance of 30.0 cm.

42. A uniformly charged rod of length L and total charge Q lies along the x axis as shown in Figure P23.42. (a) Find the components of the electric field at the point P on the y axis a distance d from the origin. (b) What are the approximate values of the field components when $d \gg L$? Explain why you would expect these results.

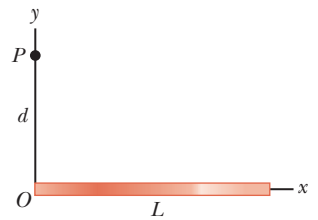


Figure P23.42

43. A continuous line of charge lies along the x axis, extending from $x = +x_0$ to positive infinity. The line carries positive charge with a uniform linear charge density λ_0 . What are (a) the magnitude and (b) the direction of the electric field at the origin?
44. A thin rod of length ℓ and uniform charge per unit length λ lies along the x axis as shown in Figure P23.44. (a) Show that the electric field at P , a distance d from the rod along its perpendicular bisector, has no x

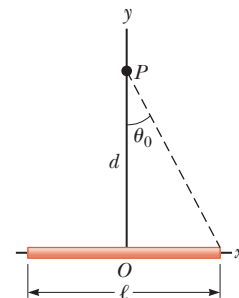


Figure P23.44

component and is given by $E = 2k_e \lambda \sin \theta_0 / d$. (b) **What If?** Using your result to part (a), show that the field of a rod of infinite length is $E = 2k_e \lambda / d$.

45. A uniformly charged insulating rod of length 14.0 cm is bent into the shape of a semicircle as shown in Figure P23.45. The rod has a total charge of $-7.50 \mu\text{C}$. Find (a) the magnitude and (b) the direction of the electric field at O , the center of the semicircle.



Figure P23.45

46. (a) Consider a uniformly charged, thin-walled, right circular cylindrical shell having total charge Q , radius R , and length ℓ . Determine the electric field at a point a distance d from the right side of the cylinder as shown in Figure P23.46. *Suggestion:* Use the result of Example 23.8 and treat the cylinder as a collection of ring charges. (b) **What If?** Consider now a solid cylinder with the same dimensions and carrying the same charge, uniformly distributed through its volume. Use the result of Example 23.9 to find the field it creates at the same point.

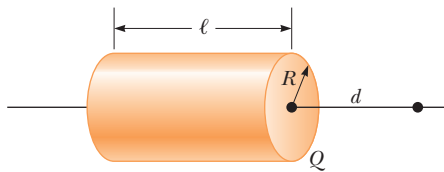


Figure P23.46

Section 23.6 Electric Field Lines

47. A negatively charged rod of finite length carries charge with a uniform charge per unit length. Sketch the electric field lines in a plane containing the rod.
48. A positively charged disk has a uniform charge per unit area σ as described in Example 23.9. Sketch the electric field lines in a plane perpendicular to the plane of the disk passing through its center.
49. Figure P23.49 shows the electric field lines for two charged particles separated by a small distance. (a) Determine the ratio q_1/q_2 . (b) What are the signs of q_1 and q_2 ?

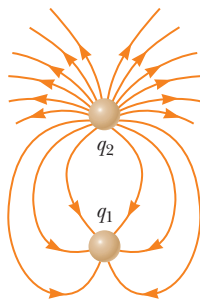


Figure P23.49

50. Three equal positive charges q are at the corners of an equilateral triangle of side a as shown in Figure P23.50. Assume the three charges together create an electric field. (a) Sketch the field lines in the plane of the charges. (b) Find the location of one point (other than ∞) where the electric field is zero. What are (c) the magnitude and (d) the direction of the electric field at P due to the two charges at the base?

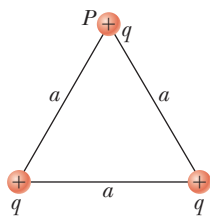


Figure P23.50

Section 23.7 Motion of a Charged Particle in a Uniform Electric Field

51. A proton accelerates from rest in a uniform electric field of 640 N/C . At one later moment, its speed is 1.20 Mm/s (nonrelativistic because v is much less than the speed of light). (a) Find the acceleration of the proton. (b) Over what time interval does the proton reach this speed? (c) How far does it move in this time interval? (d) What is its kinetic energy at the end of this interval?

52. A proton is projected in the positive x direction into a region of a uniform electric field $\vec{E} = (-6.00 \times 10^5) \hat{i} \text{ N/C}$ at $t = 0$. The proton travels 7.00 cm as it comes to rest. Determine (a) the acceleration of the proton, (b) its initial speed, and (c) the time interval over which the proton comes to rest.

53. An electron and a proton are each placed at rest in a uniform electric field of magnitude 520 N/C . Calculate the speed of each particle 48.0 ns after being released.

54. Protons are projected with an initial speed $v_i = 9.55 \text{ km/s}$ from a field-free region through a plane and into a region where a uniform electric field $\vec{E} = -720 \hat{j} \text{ N/C}$ is present above the plane as shown in Figure P23.54. The initial velocity vector of the protons makes an angle θ with the plane. The protons are to hit a target that lies at a horizontal distance of $R = 1.27 \text{ mm}$ from the point where the protons cross the plane and enter the electric field. We wish to find the angle θ at which the protons must pass through the plane to strike the target. (a) What analysis model describes the horizontal motion of the protons above the plane? (b) What analysis model describes the vertical motion of the protons above the plane? (c) Argue that Equation 4.13 would be applicable to the protons in this situation. (d) Use Equation 4.13 to write an expression for R in terms of v_i , E , the charge and mass of the proton, and the angle θ . (e) Find the two possible values of the angle θ . (f) Find the time interval during which the proton is above the plane in Figure P23.54 for each of the two possible values of θ .

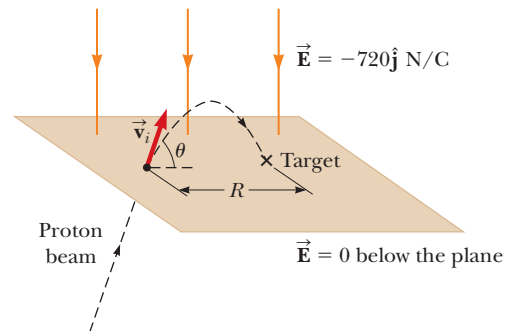


Figure P23.54

55. The electrons in a particle beam each have a kinetic energy K . What are (a) the magnitude and (b) the direction of the electric field that will stop these electrons in a distance d ?

56. Two horizontal metal plates, each 10.0 cm square, are aligned 1.00 cm apart with one above the other. They are given equal-magnitude charges of opposite sign so that a uniform downward electric field of 2.00×10^3 N/C exists in the region between them. A particle of mass 2.00×10^{-16} kg and with a positive charge of 1.00×10^{-6} C leaves the center of the bottom negative plate with an initial speed of 1.00×10^5 m/s at an angle of 37.0° above the horizontal. (a) Describe the trajectory of the particle. (b) Which plate does it strike? (c) Where does it strike, relative to its starting point?
57. **M** A proton moves at 4.50×10^5 m/s in the horizontal direction. It enters a uniform vertical electric field with a magnitude of 9.60×10^3 N/C. Ignoring any gravitational effects, find (a) the time interval required for the proton to travel 5.00 cm horizontally, (b) its vertical displacement during the time interval in which it travels 5.00 cm horizontally, and (c) the horizontal and vertical components of its velocity after it has traveled 5.00 cm horizontally.

Additional Problems

58. Three solid plastic cylinders all have radius 2.50 cm and length 6.00 cm. Find the charge of each cylinder given the following additional information about each one. Cylinder (a) carries charge with uniform density 15.0 nC/m² everywhere on its surface. Cylinder (b) carries charge with uniform density 15.0 nC/m² on its curved lateral surface only. Cylinder (c) carries charge with uniform density 500 nC/m³ throughout the plastic.
59. Consider an infinite number of identical particles, each with charge q , placed along the x axis at distances $a, 2a, 3a, 4a, \dots$ from the origin. What is the electric field at the origin due to this distribution? *Suggestion:* Use

$$1 + \frac{1}{2^2} + \frac{1}{3^2} + \frac{1}{4^2} + \dots = \frac{\pi^2}{6}$$

60. A particle with charge -3.00 nC is at the origin, and a particle with negative charge of magnitude Q is at $x = 50.0$ cm. A third particle with a positive charge is in equilibrium at $x = 20.9$ cm. What is Q ?

61. **AMT** A small block of mass m and charge Q is placed on an insulated, frictionless, inclined plane of angle θ as in Figure P23.61. An electric field is applied parallel to the incline. (a) Find an expression for the magnitude of the electric field that enables the block to remain at rest. (b) If $m = 5.40$ g, $Q = -7.00$ μ C, and $\theta = 25.0^\circ$, determine the magnitude and the direction of the electric field that enables the block to remain at rest on the incline.

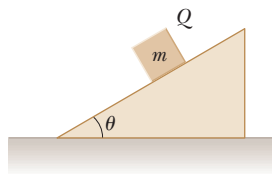


Figure P23.61

62. A small sphere of charge $q_1 = 0.800$ μ C hangs from the end of a spring as in Figure P23.62a. When another small sphere of charge $q_2 = -0.600$ μ C is held beneath

the first sphere as in Figure P23.62b, the spring stretches by $d = 3.50$ cm from its original length and reaches a new equilibrium position with a separation between the charges of $r = 5.00$ cm. What is the force constant of the spring?

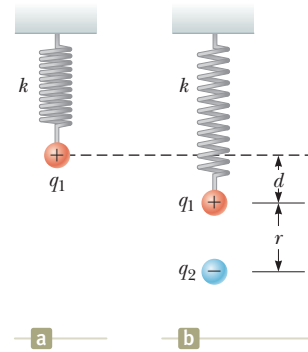


Figure P23.62

63. A line of charge starts at $x = +x_0$ and extends to positive infinity. The linear charge density is $\lambda = \lambda_0 x_0/x$, where λ_0 is a constant. Determine the electric field at the origin.
64. A small sphere of mass $m = 7.50$ g and charge $q_1 = 32.0$ nC is attached to the end of a string and hangs vertically as in Figure P23.64. A second charge of equal mass and charge $q_2 = -58.0$ nC is located below the first charge a distance $d = 2.00$ cm below the first charge as in Figure P23.64. (a) Find the tension in the string. (b) If the string can withstand a maximum tension of 0.180 N, what is the smallest value d can have before the string breaks?

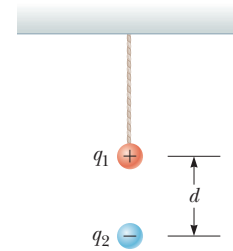


Figure P23.64

65. **AMT** A uniform electric field of magnitude 640 N/C exists between two parallel plates that are 4.00 cm apart. A proton is released from rest at the positive plate at the same instant an electron is released from rest at the negative plate. (a) Determine the distance from the positive plate at which the two pass each other. Ignore the electrical attraction between the proton and electron. (b) **What If?** Repeat part (a) for a sodium ion (Na^+) and a chloride ion (Cl^-).
66. Two small silver spheres, each with a mass of 10.0 g, are separated by 1.00 m. Calculate the fraction of the electrons in one sphere that must be transferred to the other to produce an attractive force of 1.00×10^4 N (about 1 ton) between the spheres. The number of electrons per atom of silver is 47.

- 67.** A charged cork ball of mass 1.00 g is suspended on a light string in the presence of a uniform electric field as shown in Figure P23.67. When $\vec{E} = (3.00\hat{i} + 5.00\hat{j}) \times 10^5\text{ N/C}$, the ball is in equilibrium at $\theta = 37.0^\circ$. Find (a) the charge on the ball and (b) the tension in the string.

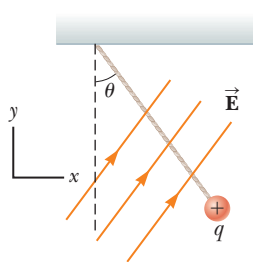


Figure P23.67

Problems 67 and 68.

- 68.** A charged cork ball of mass m is suspended on a light string in the presence of a uniform electric field as shown in Figure P23.67. When $\vec{E} = A\hat{i} + B\hat{j}$, where A and B are positive quantities, the ball is in equilibrium at the angle θ . Find (a) the charge on the ball and (b) the tension in the string.
- 69.** Three charged particles are aligned along the x axis as shown in Figure P23.69. Find the electric field at (a) the position $(2.00\text{ m}, 0)$ and (b) the position $(0, 2.00\text{ m})$.

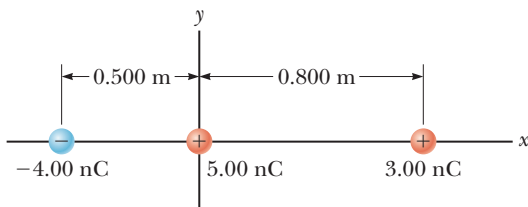


Figure P23.69

- 70.** Two point charges $q_A = -12.0\ \mu\text{C}$ and $q_B = 45.0\ \mu\text{C}$ and a third particle with unknown charge q_C are located on the x axis. The particle q_A is at the origin, and q_B is at $x = 15.0\text{ cm}$. The third particle is to be placed so that each particle is in equilibrium under the action of the electric forces exerted by the other two particles. (a) Is this situation possible? If so, is it possible in more than one way? Explain. Find (b) the required location and (c) the magnitude and the sign of the charge of the third particle.

- 71.** A line of positive charge is formed into a semicircle of radius $R = 60.0\text{ cm}$ as shown in Figure P23.71. The charge per unit length along the semicircle is described by the expression $\lambda = \lambda_0 \cos \theta$. The total charge on the semicircle is $12.0\ \mu\text{C}$. Calculate the total force on a charge of $3.00\ \mu\text{C}$ placed at the center of curvature P .

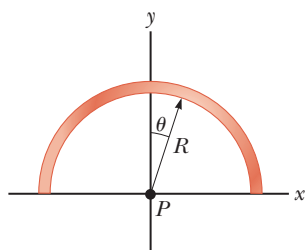


Figure P23.71

- 72.** Four identical charged particles ($q = +10.0\ \mu\text{C}$) are located on the corners of a rectangle as shown in Figure P23.72. The dimensions of the rectangle are $L = 60.0\text{ cm}$ and $W = 15.0\text{ cm}$. Calculate (a) the magnitude and (b) the direction of the total electric force exerted on the charge at the lower left corner by the other three charges.

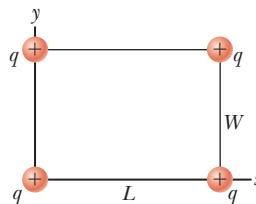


Figure P23.72

- 73.** Two small spheres hang in equilibrium at the bottom ends of threads, 40.0 cm long, that have their top ends tied to the same fixed point. One sphere has mass 2.40 g and charge $+300\text{ nC}$. The other sphere has the same mass and charge $+200\text{ nC}$. Find the distance between the centers of the spheres.

- 74.** Why is the following situation impossible? An electron enters a region of uniform electric field between two parallel plates. The plates are used in a cathode-ray tube to adjust the position of an electron beam on a distant fluorescent screen. The magnitude of the electric field between the plates is 200 N/C . The plates are 0.200 m in length and are separated by 1.50 cm . The electron enters the region at a speed of $3.00 \times 10^6\text{ m/s}$, traveling parallel to the plane of the plates in the direction of their length. It leaves the plates heading toward its correct location on the fluorescent screen.

- 75. Review.** Two identical blocks resting on a frictionless, horizontal surface are connected by a light spring having a spring constant $k = 100\text{ N/m}$ and an unstretched length $L_i = 0.400\text{ m}$ as shown in Figure P23.75a. A charge Q is slowly placed on each block, causing the spring to stretch to an equilibrium length $L = 0.500\text{ m}$ as shown in Figure P23.75b. Determine the value of Q , modeling the blocks as charged particles.

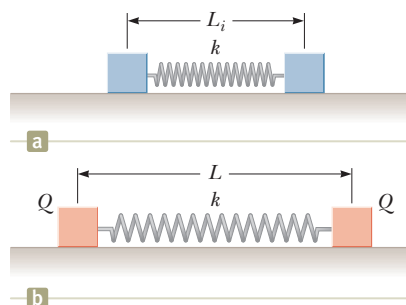


Figure P23.75 Problems 75 and 76.

- 76. Review.** Two identical blocks resting on a frictionless, horizontal surface are connected by a light spring having a spring constant k and an unstretched length L_i as shown in Figure P23.75a. A charge Q is slowly placed on each block, causing the spring to stretch to an equilibrium length L as shown in Figure P23.75b. Determine the value of Q , modeling the blocks as charged particles.

- 77.** Three identical point charges, each of mass $m = 0.100\text{ kg}$, hang from three strings as shown in Figure

P23.77. If the lengths of the left and right strings are each $L = 30.0$ cm and the angle θ is 45.0° , determine the value of q .

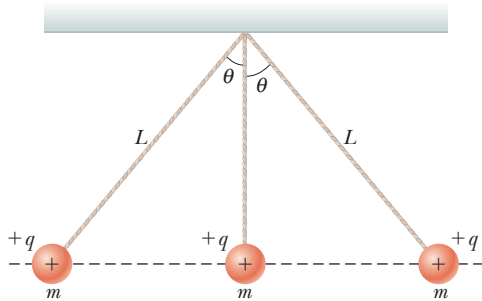


Figure P23.77

78. Show that the maximum magnitude E_{\max} of the electric field along the axis of a uniformly charged ring occurs at $x = a/\sqrt{2}$ (see Fig. 23.16) and has the value $Q/(6\sqrt{3}\pi\epsilon_0 a^2)$.
79. Two hard rubber spheres, each of mass $m = 15.0$ g, are rubbed with fur on a dry day and are then suspended with two insulating strings of length $L = 5.00$ cm whose support points are a distance $d = 3.00$ cm from each other as shown in Figure P23.79. During the rubbing process, one sphere receives exactly twice the charge of the other. They are observed to hang at equilibrium, each at an angle of $\theta = 10.0^\circ$ with the vertical. Find the amount of charge on each sphere.

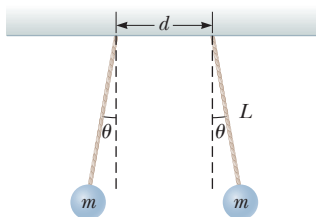


Figure P23.79

80. Two identical beads each have a mass m and charge q . When placed in a hemispherical bowl of radius R with frictionless, nonconducting walls, the beads move, and at equilibrium, they are a distance d apart (Fig. P23.80). (a) Determine the charge q on each bead. (b) Determine the charge required for d to become equal to $2R$.

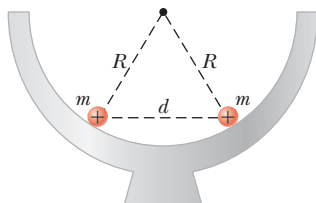


Figure P23.80

81. Two small spheres of mass m are suspended from strings of length ℓ that are connected at a common point. One sphere has charge Q and the other charge $2Q$. The strings make angles θ_1 and θ_2 with the vertical.

(a) Explain how θ_1 and θ_2 are related. (b) Assume θ_1 and θ_2 are small. Show that the distance r between the spheres is approximately

$$r \approx \left(\frac{4k_e Q^2 \ell}{mg} \right)^{1/3}$$

82. **Review.** A negatively charged particle $-q$ is placed at the center of a uniformly charged ring, where the ring has a total positive charge Q as shown in Figure P23.82. The particle, confined to move along the x axis, is moved a small distance x along the axis (where $x \ll a$) and released. Show that the particle oscillates in simple harmonic motion with a frequency given by

$$f = \frac{1}{2\pi} \left(\frac{k_e q Q}{m a^3} \right)^{1/2}$$

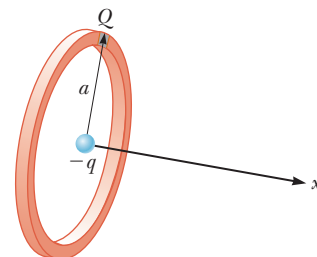


Figure P23.82

83. **Review.** A 1.00-g cork ball with charge $2.00 \mu\text{C}$ is suspended vertically on a 0.500-m-long light string in the presence of a uniform, downward-directed electric field of magnitude $E = 1.00 \times 10^5$ N/C. If the ball is displaced slightly from the vertical, it oscillates like a simple pendulum. (a) Determine the period of this oscillation. (b) Should the effect of gravitation be included in the calculation for part (a)? Explain.

Challenge Problems

84. Identical thin rods of length $2a$ carry equal charges $+Q$ uniformly distributed along their lengths. The rods lie along the x axis with their centers separated by a distance $b > 2a$ (Fig. P23.84). Show that the magnitude of the force exerted by the left rod on the right one is

$$F = \left(\frac{k_e Q^2}{4a^2} \right) \ln \left(\frac{b^2}{b^2 - 4a^2} \right)$$

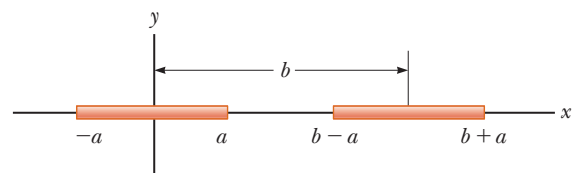


Figure P23.84

85. Eight charged particles, each of magnitude q , are located on the corners of a cube of edge s as shown in Figure P23.85 (page 724). (a) Determine the x , y , and z components of the total force exerted by the other charges on the charge located at point A. What are

(b) the magnitude and (c) the direction of this total force?

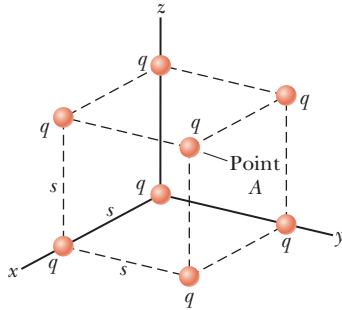


Figure P23.85 Problems 85 and 86.

86. Consider the charge distribution shown in Figure P23.85. (a) Show that the magnitude of the electric field at the center of any face of the cube has a value of $2.18k_e q/s^2$. (b) What is the direction of the electric field at the center of the top face of the cube?
87. **Review.** An electric dipole in a uniform horizontal electric field is displaced slightly from its equilibrium position as shown in Figure P23.87, where θ is small. The separation of the charges is $2a$, and each of the two particles has mass m . (a) Assuming the dipole is released from this position, show that its angular orientation exhibits simple harmonic motion with a frequency

$$f = \frac{1}{2\pi} \sqrt{\frac{qE}{ma}}$$

What If? (b) Suppose the masses of the two charged particles in the dipole are not the same even though each particle continues to have charge q . Let the masses of the particles be m_1 and m_2 . Show that the frequency of the oscillation in this case is

$$f = \frac{1}{2\pi} \sqrt{\frac{qE(m_1 + m_2)}{2am_1m_2}}$$

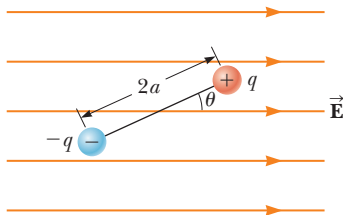


Figure P23.87

88. Inez is putting up decorations for her sister's quinceañera (fifteenth birthday party). She ties three light silk ribbons together to the top of a gateway and hangs a rubber balloon from each ribbon (Fig. P23.88). To include the effects of the gravitational and buoyant forces on it, each balloon can be modeled as a particle of mass 2.00 g, with its center 50.0 cm from the point of support. Inez rubs the whole surface of each balloon with her woolen scarf, making the balloons hang separately with gaps between them. Looking directly upward from below the balloons, Inez notices that the centers of the hanging balloons form a horizontal equilateral triangle with sides 30.0 cm long. What is the common charge each balloon carries?





Figure P23.88

89. A line of charge with uniform density 35.0 nC/m lies along the line $y = -15.0$ cm between the points with coordinates $x = 0$ and $x = 40.0$ cm. Find the electric field it creates at the origin.
90. A particle of mass m and charge q moves at high speed along the x axis. It is initially near $x = -\infty$, and it ends up near $x = +\infty$. A second charge Q is fixed at the point $x = 0$, $y = -d$. As the moving charge passes the stationary charge, its x component of velocity does not change appreciably, but it acquires a small velocity in the y direction. Determine the angle through which the moving charge is deflected from the direction of its initial velocity.
91. Two particles, each with charge 52.0 nC, are located on the y axis at $y = 25.0$ cm and $y = -25.0$ cm. (a) Find the vector electric field at a point on the x axis as a function of x . (b) Find the field at $x = 36.0$ cm. (c) At what location is the field $1.00\hat{i}$ kN/C? You may need a computer to solve this equation. (d) At what location is the field $16.0\hat{i}$ kN/C?

Gauss's Law



- 24.1 Electric Flux
- 24.2 Gauss's Law
- 24.3 Application of Gauss's Law to Various Charge Distributions
- 24.4 Conductors in Electrostatic Equilibrium

In Chapter 23, we showed how to calculate the electric field due to a given charge distribution by integrating over the distribution. In this chapter, we describe *Gauss's law* and an alternative procedure for calculating electric fields. Gauss's law is based on the inverse-square behavior of the electric force between point charges. Although Gauss's law is a direct consequence of Coulomb's law, it is more convenient for calculating the electric fields of highly symmetric charge distributions and makes it possible to deal with complicated problems using qualitative reasoning. As we show in this chapter, Gauss's law is important in understanding and verifying the properties of conductors in electrostatic equilibrium.

In a tabletop plasma ball, the colorful lines emanating from the sphere give evidence of strong electric fields. Using Gauss's law, we show in this chapter that the electric field surrounding a uniformly charged sphere is identical to that of a point charge. (Steve Cole/Getty Images)

4.1 Electric Flux

The concept of electric field lines was described qualitatively in Chapter 23. We now treat electric field lines in a more quantitative way.

Consider an electric field that is uniform in both magnitude and direction as shown in Figure 24.1. The field lines penetrate a rectangular surface of area whose plane is oriented perpendicular to the field. Recall from Section 23.6 that the number of lines per unit area (in other words, the *line density*) is proportional to the magnitude of the electric field. Therefore, the total number of lines penetrating the surface is proportional to the product EA . This product of the magnitude of the electric field and surface area perpendicular to the field is called the **electric flux** (uppercase Greek letter phi):

(24.1)

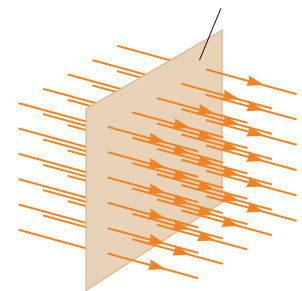


Figure 24.1 Field lines representing a uniform electric field penetrating a plane of area perpendicular to the field.

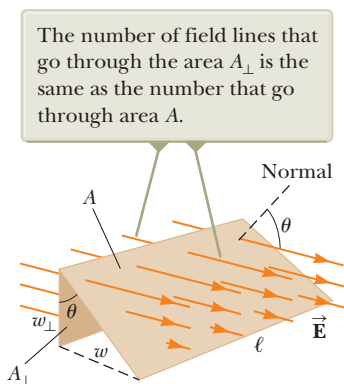


Figure 24.2 Field lines representing a uniform electric field penetrating an area A whose normal is at an angle θ to the field.

From the SI units of E and A , we see that Φ_E has units of newton meters squared per coulomb ($\text{N} \cdot \text{m}^2/\text{C}$). Electric flux is proportional to the number of electric field lines penetrating some surface.

If the surface under consideration is not perpendicular to the field, the flux through it must be less than that given by Equation 24.1. Consider Figure 24.2, where the normal to the surface of area A is at an angle θ to the uniform electric field. Notice that the number of lines that cross this area A is equal to the number of lines that cross the area A_{\perp} , which is a projection of area A onto a plane oriented perpendicular to the field. The area A is the product of the length and the width of the surface: $A = \ell w$. At the left edge of the figure, we see that the widths of the surfaces are related by $w_{\perp} = w \cos \theta$. The area A_{\perp} is given by $A_{\perp} = \ell w_{\perp} = \ell w \cos \theta$ and we see that the two areas are related by $A_{\perp} = A \cos \theta$. Because the flux through A equals the flux through A_{\perp} , the flux through A is

$$\Phi_E = EA_{\perp} = EA \cos \theta \quad (24.2)$$

From this result, we see that the flux through a surface of fixed area A has a maximum value EA when the surface is perpendicular to the field (when the normal to the surface is parallel to the field, that is, when $\theta = 0^\circ$ in Fig. 24.2); the flux is zero when the surface is parallel to the field (when the normal to the surface is perpendicular to the field, that is, when $\theta = 90^\circ$).

In this discussion, the angle θ is used to describe the orientation of the surface of area A . We can also interpret the angle as that between the electric field vector and the normal to the surface. In this case, the product $E \cos \theta$ in Equation 24.2 is the component of the electric field perpendicular to the surface. The flux through the surface can then be written $\Phi_E = (E \cos \theta)A = E_n A$, where we use E_n as the component of the electric field normal to the surface.

We assumed a uniform electric field in the preceding discussion. In more general situations, the electric field may vary over a large surface. Therefore, the definition of flux given by Equation 24.2 has meaning only for a small element of area over which the field is approximately constant. Consider a general surface divided into a large number of small elements, each of area ΔA_i . It is convenient to define a vector $\Delta \vec{A}_i$ whose magnitude represents the area of the i th element of the large surface and whose direction is defined to be *perpendicular* to the surface element as shown in Figure 24.3. The electric field \vec{E}_i at the location of this element makes an angle θ_i with the vector $\Delta \vec{A}_i$. The electric flux $\Phi_{E,i}$ through this element is

$$\Phi_{E,i} = E_i \Delta A_i \cos \theta_i = \vec{E}_i \cdot \Delta \vec{A}_i$$

where we have used the definition of the scalar product of two vectors ($\vec{A} \cdot \vec{B} \equiv AB \cos \theta$; see Chapter 7). Summing the contributions of all elements gives an approximation to the total flux through the surface:

$$\Phi_E \approx \sum \vec{E}_i \cdot \Delta \vec{A}_i$$

If the area of each element approaches zero, the number of elements approaches infinity and the sum is replaced by an integral. Therefore, the general definition of electric flux is

$$\Phi_E \equiv \int_{\text{surface}} \vec{E} \cdot d\vec{A} \quad (24.3)$$

Equation 24.3 is a *surface integral*, which means it must be evaluated over the surface in question. In general, the value of Φ_E depends both on the field pattern and on the surface.

We are often interested in evaluating the flux through a *closed surface*, defined as a surface that divides space into an inside and an outside region so that one cannot move from one region to the other without crossing the surface. The surface of a sphere, for example, is a closed surface. By convention, if the area element in Equa-

The electric field makes an angle θ_i with the vector $\Delta \vec{A}_i$, defined as being normal to the surface element.

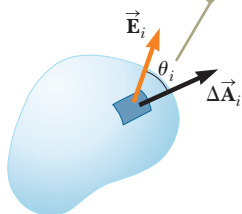


Figure 24.3 A small element of surface area ΔA_i in an electric field.

Definition of electric flux ►

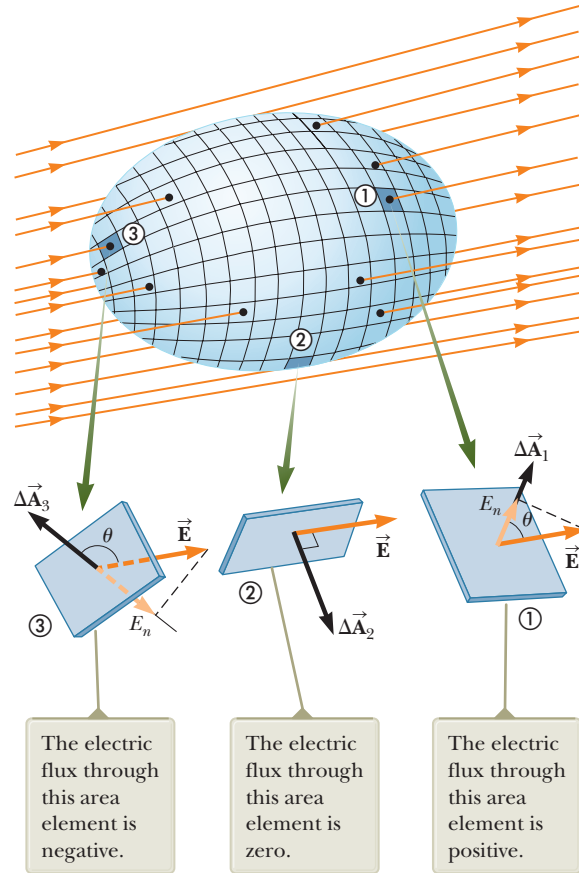


Figure 24.4 A closed surface in an electric field. The area vectors are, by convention, normal to the surface and point outward.

tion 24.3 is part of a closed surface, the direction of the area vector is chosen so that the vector points outward from the surface. If the area element is not part of a closed surface, the direction of the area vector is chosen so that the angle between the area vector and the electric field vector is less than or equal to 90° .

Consider the closed surface in Figure 24.4. The vectors $\Delta \vec{A}_i$ point in different directions for the various surface elements, but for each element they are normal to the surface and point outward. At the element labeled ①, the field lines are crossing the surface from the inside to the outside and $\theta < 90^\circ$; hence, the flux $\Phi_{E,1} = \vec{E} \cdot \Delta \vec{A}_1$ through this element is positive. For element ②, the field lines graze the surface (perpendicular to $\Delta \vec{A}_2$); therefore, $\theta = 90^\circ$ and the flux is zero. For elements such as ③, where the field lines are crossing the surface from outside to inside, $180^\circ > \theta > 90^\circ$ and the flux is negative because $\cos \theta$ is negative. The *net* flux through the surface is proportional to the net number of lines leaving the surface, where the net number means *the number of lines leaving the surface minus the number of lines entering the surface*. If more lines are leaving than entering, the net flux is positive. If more lines are entering than leaving, the net flux is negative. Using the symbol \oint to represent an integral over a closed surface, we can write the net flux Φ_E through a closed surface as

$$\Phi_E = \oint \vec{E} \cdot d\vec{A} = \oint E_n dA \quad (24.4)$$

where E_n represents the component of the electric field normal to the surface.

Quick Quiz 24.1 Suppose a point charge is located at the center of a spherical surface. The electric field at the surface of the sphere and the total flux through the sphere are determined. Now the radius of the sphere is halved.

- ∴ What happens to the flux through the sphere and the magnitude of the electric field at the surface of the sphere? (a) The flux and field both increase.
- ∴ (b) The flux and field both decrease. (c) The flux increases, and the field decreases. (d) The flux decreases, and the field increases. (e) The flux remains the same, and the field increases. (f) The flux decreases, and the field remains the same.

Example 24.1 Flux Through a Cube

Consider a uniform electric field \vec{E} oriented in the x direction in empty space. A cube of edge length ℓ is placed in the field, oriented as shown in Figure 24.5. Find the net electric flux through the surface of the cube.

SOLUTION

Conceptualize Examine Figure 24.5 carefully. Notice that the electric field lines pass through two faces perpendicularly and are parallel to four other faces of the cube.

Categorize We evaluate the flux from its definition, so we categorize this example as a substitution problem.

The flux through four of the faces (③, ④, and the unnumbered faces) is zero because \vec{E} is parallel to the four faces and therefore perpendicular to $d\vec{A}$ on these faces.

Write the integrals for the net flux through faces ① and ②:

For face ①, \vec{E} is constant and directed inward but $d\vec{A}_1$ is directed outward ($\theta = 180^\circ$). Find the flux through this face:

For face ②, \vec{E} is constant and outward and in the same direction as $d\vec{A}_2$ ($\theta = 0^\circ$). Find the flux through this face:

Find the net flux by adding the flux over all six faces:

$$\Phi_E = \int_1 \vec{E} \cdot d\vec{A} + \int_2 \vec{E} \cdot d\vec{A}$$

$$\int_1 \vec{E} \cdot d\vec{A} = \int_1 E(\cos 180^\circ) dA = -E \int_1 dA = -EA = -E\ell^2$$

$$\int_2 \vec{E} \cdot d\vec{A} = \int_2 E(\cos 0^\circ) dA = E \int_2 dA = +EA = E\ell^2$$

$$\Phi_E = -E\ell^2 + E\ell^2 + 0 + 0 + 0 + 0 = 0$$

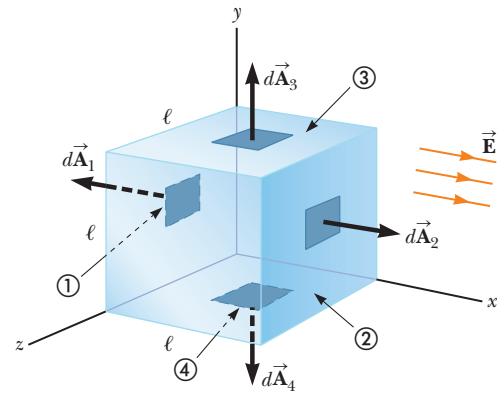


Figure 24.5 (Example 24.1) A closed surface in the shape of a cube in a uniform electric field oriented parallel to the x axis. Side ④ is the bottom of the cube, and side ① is opposite side ②.

When the charge is at the center of the sphere, the electric field is everywhere normal to the surface and constant in magnitude.

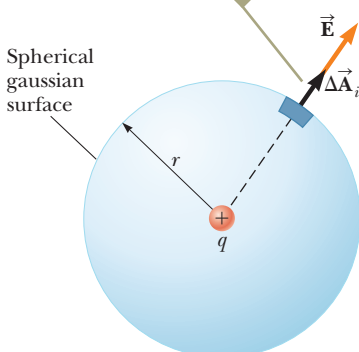


Figure 24.6 A spherical gaussian surface of radius r surrounding a positive point charge q .

24.2 Gauss's Law

In this section, we describe a general relationship between the net electric flux through a closed surface (often called a *gaussian surface*) and the charge enclosed by the surface. This relationship, known as *Gauss's law*, is of fundamental importance in the study of electric fields.

Consider a positive point charge q located at the center of a sphere of radius r as shown in Figure 24.6. From Equation 23.9, we know that the magnitude of the electric field everywhere on the surface of the sphere is $E = k_e q/r^2$. The field lines are directed radially outward and hence are perpendicular to the surface at every point on the surface. That is, at each surface point, \vec{E} is parallel to the vector $\Delta\vec{A}_i$ representing a local element of area ΔA_i surrounding the surface point. Therefore,

$$\vec{E} \cdot \Delta\vec{A}_i = E \Delta A_i$$

and, from Equation 24.4, we find that the net flux through the gaussian surface is

$$\Phi_E = \oint \vec{E} \cdot d\vec{A} = \oint E dA = E \oint dA$$

where we have moved E outside of the integral because, by symmetry, E is constant over the surface. The value of E is given by $E = k_e q/r^2$. Furthermore, because the surface is spherical, $\oint dA = A = 4\pi r^2$. Hence, the net flux through the gaussian surface is

$$\Phi_E = k_e \frac{q}{r^2} (4\pi r^2) = 4\pi k_e q$$

Recalling from Equation 23.3 that $k_e = 1/4\pi\epsilon_0$, we can write this equation in the form

$$\Phi_E = \frac{q}{\epsilon_0} \quad (24.5)$$

Equation 24.5 shows that the net flux through the spherical surface is proportional to the charge inside the surface. The flux is independent of the radius r because the area of the spherical surface is proportional to r^2 , whereas the electric field is proportional to $1/r^2$. Therefore, in the product of area and electric field, the dependence on r cancels.

Now consider several closed surfaces surrounding a charge q as shown in Figure 24.7. Surface S_1 is spherical, but surfaces S_2 and S_3 are not. From Equation 24.5, the flux that passes through S_1 has the value q/ϵ_0 . As discussed in the preceding section, flux is proportional to the number of electric field lines passing through a surface. The construction shown in Figure 24.7 shows that the number of lines through S_1 is equal to the number of lines through the nonspherical surfaces S_2 and S_3 . Therefore,

the net flux through *any* closed surface surrounding a point charge q is given by q/ϵ_0 and is independent of the shape of that surface.

Now consider a point charge located *outside* a closed surface of arbitrary shape as shown in Figure 24.8. As can be seen from this construction, any electric field line entering the surface leaves the surface at another point. The number of electric field lines entering the surface equals the number leaving the surface. Therefore, the net electric flux through a closed surface that surrounds no charge is zero. Applying this result to Example 24.1, we see that the net flux through the cube is zero because there is no charge inside the cube.

Let's extend these arguments to two generalized cases: (1) that of many point charges and (2) that of a continuous distribution of charge. We once again use the superposition principle, which states that the electric field due to many charges is



Karl Friedrich Gauss
German mathematician and astronomer (1777–1855)

Gauss received a doctoral degree in mathematics from the University of Helmstedt in 1799. In addition to his work in electromagnetism, he made contributions to mathematics and science in number theory, statistics, non-Euclidean geometry, and cometary orbital mechanics. He was a founder of the German Magnetic Union, which studies the Earth's magnetic field on a continual basis.

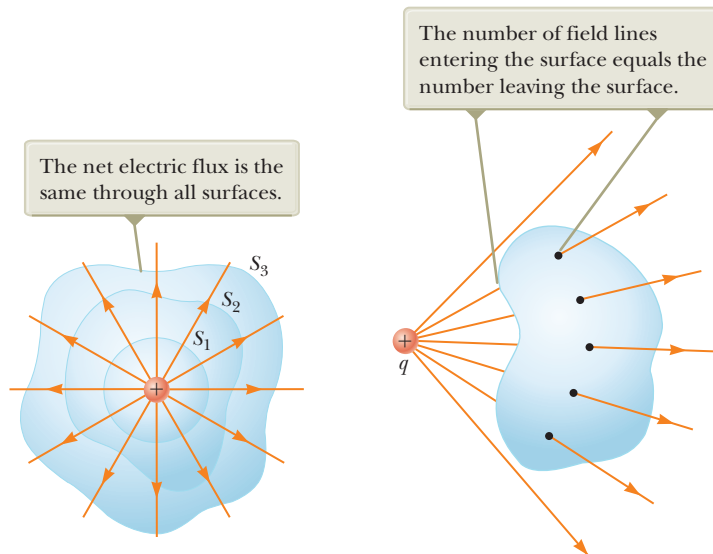


Figure 24.7 Closed surfaces of various shapes surrounding a positive charge.

Figure 24.8 A point charge located *outside* a closed surface.

Charge q_4 does not contribute to the flux through any surface because it is outside all surfaces.

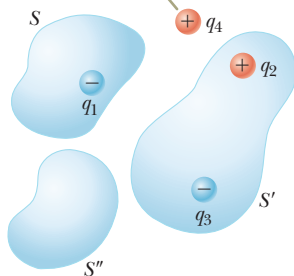


Figure 24.9 The net electric flux through any closed surface depends only on the charge *inside* that surface. The net flux through surface S is q_1/ϵ_0 , the net flux through surface S' is $(q_2 + q_3)/\epsilon_0$, and the net flux through surface S'' is zero.

Pitfall Prevention 24.1

Zero Flux Is Not Zero Field

In two situations, there is zero flux through a closed surface: either (1) there are no charged particles enclosed by the surface or (2) there are charged particles enclosed, but the net charge inside the surface is zero. For either situation, it is *incorrect* to conclude that the electric field on the surface is zero. Gauss's law states that the electric *flux* is proportional to the enclosed charge, not the electric *field*.

the vector sum of the electric fields produced by the individual charges. Therefore, the flux through any closed surface can be expressed as

$$\oint \vec{E} \cdot d\vec{A} = \oint (\vec{E}_1 + \vec{E}_2 + \dots) \cdot d\vec{A}$$

where \vec{E} is the total electric field at any point on the surface produced by the vector addition of the electric fields at that point due to the individual charges. Consider the system of charges shown in Figure 24.9. The surface S surrounds only one charge, q_1 ; hence, the net flux through S is q_1/ϵ_0 . The flux through S due to charges q_2 , q_3 , and q_4 outside it is zero because each electric field line from these charges that enters S at one point leaves it at another. The surface S' surrounds charges q_2 and q_3 ; hence, the net flux through it is $(q_2 + q_3)/\epsilon_0$. Finally, the net flux through surface S'' is zero because there is no charge inside this surface. That is, *all* the electric field lines that enter S'' at one point leave at another. Charge q_4 does not contribute to the net flux through any of the surfaces.

The mathematical form of **Gauss's law** is a generalization of what we have just described and states that the net flux through *any* closed surface is

$$\Phi_E = \oint \vec{E} \cdot d\vec{A} = \frac{q_{\text{in}}}{\epsilon_0} \quad (24.6)$$

where \vec{E} represents the electric field at any point on the surface and q_{in} represents the net charge inside the surface.

When using Equation 24.6, you should note that although the charge q_{in} is the net charge inside the gaussian surface, \vec{E} represents the *total electric field*, which includes contributions from charges both inside and outside the surface.

In principle, Gauss's law can be solved for \vec{E} to determine the electric field due to a system of charges or a continuous distribution of charge. In practice, however, this type of solution is applicable only in a limited number of highly symmetric situations. In the next section, we use Gauss's law to evaluate the electric field for charge distributions that have spherical, cylindrical, or planar symmetry. If one chooses the gaussian surface surrounding the charge distribution carefully, the integral in Equation 24.6 can be simplified and the electric field determined.

- Quick Quiz 24.2** If the net flux through a gaussian surface is zero, the following four statements *could be true*. Which of the statements *must be true*? (a) There are no charges inside the surface. (b) The net charge inside the surface is zero. (c) The electric field is zero everywhere on the surface. (d) The number of electric field lines entering the surface equals the number leaving the surface.

Conceptual Example 24.2 Flux Due to a Point Charge

A spherical gaussian surface surrounds a point charge q . Describe what happens to the total flux through the surface if (A) the charge is tripled, (B) the radius of the sphere is doubled, (C) the surface is changed to a cube, and (D) the charge is moved to another location inside the surface.

SOLUTION

- (A) The flux through the surface is tripled because flux is proportional to the amount of charge inside the surface.
 (B) The flux does not change because all electric field lines from the charge pass through the sphere, regardless of its radius.
 (C) The flux does not change when the shape of the gaussian surface changes because all electric field lines from the charge pass through the surface, regardless of its shape.
 (D) The flux does not change when the charge is moved to another location inside that surface because Gauss's law refers to the total charge enclosed, regardless of where the charge is located inside the surface.

24.3 Application of Gauss's Law to Various Charge Distributions

As mentioned earlier, Gauss's law is useful for determining electric fields when the charge distribution is highly symmetric. The following examples demonstrate ways of choosing the gaussian surface over which the surface integral given by Equation 24.6 can be simplified and the electric field determined. In choosing the surface, always take advantage of the symmetry of the charge distribution so that E can be removed from the integral. The goal in this type of calculation is to determine a surface for which each portion of the surface satisfies one or more of the following conditions:

1. The value of the electric field can be argued by symmetry to be constant over the portion of the surface.
2. The dot product in Equation 24.6 can be expressed as a simple algebraic product $E dA$ because \vec{E} and $d\vec{A}$ are parallel.
3. The dot product in Equation 24.6 is zero because \vec{E} and $d\vec{A}$ are perpendicular.
4. The electric field is zero over the portion of the surface.

Different portions of the gaussian surface can satisfy different conditions as long as every portion satisfies at least one condition. All four conditions are used in examples throughout the remainder of this chapter and will be identified by number. If the charge distribution does not have sufficient symmetry such that a gaussian surface that satisfies these conditions can be found, Gauss's law is still true, but is not useful for determining the electric field for that charge distribution.

Pitfall Prevention 24.2

Gaussian Surfaces Are Not Real

A gaussian surface is an imaginary surface you construct to satisfy the conditions listed here. It does not have to coincide with a physical surface in the situation.

Example 24.3 A Spherically Symmetric Charge Distribution

An insulating solid sphere of radius a has a uniform volume charge density ρ and carries a total positive charge Q (Fig. 24.10).

(A) Calculate the magnitude of the electric field at a point outside the sphere.

SOLUTION

Conceptualize Notice how this problem differs from our previous discussion of Gauss's law. The electric field due to point charges was discussed in Section 24.2. Now we are considering the electric field due to a distribution of charge. We found the field for various distributions of charge in Chapter 23 by integrating over the distribution. This example demonstrates a difference from our discussions in Chapter 23. In this chapter, we find the electric field using Gauss's law.

Categorize Because the charge is distributed uniformly throughout the sphere, the charge distribution has spherical symmetry and we can apply Gauss's law to find the electric field.

Analyze To reflect the spherical symmetry, let's choose a spherical gaussian surface of radius r , concentric with the sphere, as shown in Figure 24.10a. For this choice, condition (2) is satisfied everywhere on the surface and $\vec{E} \cdot d\vec{A} = E dA$.

continued

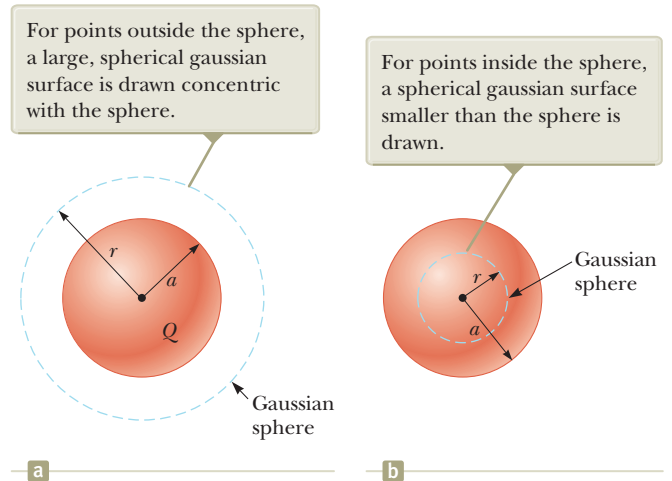


Figure 24.10 (Example 24.3) A uniformly charged insulating sphere of radius a and total charge Q . In diagrams such as this one, the dotted line represents the intersection of the gaussian surface with the plane of the page.

24.3 continued

Replace $\vec{\mathbf{E}} \cdot d\vec{\mathbf{A}}$ in Gauss's law with $E dA$:

$$\Phi_E = \oint \vec{\mathbf{E}} \cdot d\vec{\mathbf{A}} = \oint E dA = \frac{Q}{\epsilon_0}$$

By symmetry, E has the same value everywhere on the surface, which satisfies condition (1), so we can remove E from the integral:

$$\oint E dA = E \oint dA = E(4\pi r^2) = \frac{Q}{\epsilon_0}$$

Solve for E :

$$(1) \quad E = \frac{Q}{4\pi\epsilon_0 r^2} = k_e \frac{Q}{r^2} \quad (\text{for } r > a)$$

Finalize This field is identical to that for a point charge. Therefore, **the electric field due to a uniformly charged sphere in the region external to the sphere is equivalent to that of a point charge located at the center of the sphere.**

(B) Find the magnitude of the electric field at a point inside the sphere.

SOLUTION

Analyze In this case, let's choose a spherical gaussian surface having radius $r < a$, concentric with the insulating sphere (Fig. 24.10b). Let V' be the volume of this smaller sphere. To apply Gauss's law in this situation, recognize that the charge q_{in} within the gaussian surface of volume V' is less than Q .

Calculate q_{in} by using $q_{\text{in}} = \rho V'$:

$$q_{\text{in}} = \rho V' = \rho \left(\frac{4}{3}\pi r^3\right)$$

Notice that conditions (1) and (2) are satisfied everywhere on the gaussian surface in Figure 24.10b. Apply Gauss's law in the region $r < a$:

$$\oint E dA = E \oint dA = E(4\pi r^2) = \frac{q_{\text{in}}}{\epsilon_0}$$

Solve for E and substitute for q_{in} :

$$E = \frac{q_{\text{in}}}{4\pi\epsilon_0 r^2} = \frac{\rho \left(\frac{4}{3}\pi r^3\right)}{4\pi\epsilon_0 r^2} = \frac{\rho}{3\epsilon_0} r$$

Substitute $\rho = Q/\frac{4}{3}\pi a^3$ and $\epsilon_0 = 1/4\pi k_e$:

$$(2) \quad E = \frac{Q/\frac{4}{3}\pi a^3}{3(1/4\pi k_e)} r = k_e \frac{Q}{a^3} r \quad (\text{for } r < a)$$

Finalize This result for E differs from the one obtained in part (A). It shows that $E \rightarrow 0$ as $r \rightarrow 0$. Therefore, the result eliminates the problem that would exist at $r = 0$ if E varied as $1/r^2$ inside the sphere as it does outside the sphere. That is, if $E \propto 1/r^2$ for $r < a$, the field would be infinite at $r = 0$, which is physically impossible.

WHAT IF? Suppose the radial position $r = a$ is approached from inside the sphere and from outside. Do we obtain the same value of the electric field from both directions?

Answer Equation (1) shows that the electric field approaches a value from the outside given by

$$E = \lim_{r \rightarrow a} \left(k_e \frac{Q}{r^2} \right) = k_e \frac{Q}{a^2}$$

From the inside, Equation (2) gives

$$E = \lim_{r \rightarrow a} \left(k_e \frac{Q}{a^3} r \right) = k_e \frac{Q}{a^3} a = k_e \frac{Q}{a^2}$$

Therefore, the value of the field is the same as the surface is approached from both directions. A plot of E versus r is shown in Figure 24.11. Notice that the magnitude of the field is continuous.

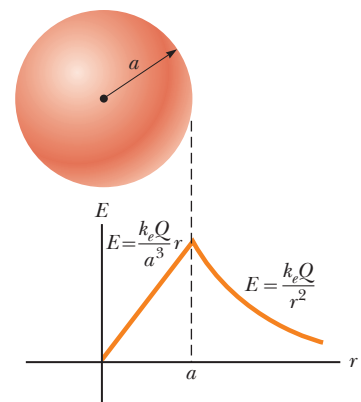


Figure 24.11 (Example 24.3) A plot of E versus r for a uniformly charged insulating sphere. The electric field inside the sphere ($r < a$) varies linearly with r . The field outside the sphere ($r > a$) is the same as that of a point charge Q located at $r = 0$.

Example 24.4 Cylindrically Symmetric Charge Distribution

Find the electric field a distance r from a line of positive charge of infinite length and constant charge per unit length λ (Fig. 24.12a).

SOLUTION

Conceptualize The line of charge is *infinitely* long. Therefore, the field is the same at all points equidistant from the line, regardless of the vertical position of the point in Figure 24.12a. We expect the field to become weaker as we move farther away from the line of charge.

Categorize Because the charge is distributed uniformly along the line, the charge distribution has cylindrical symmetry and we can apply Gauss's law to find the electric field.

Analyze The symmetry of the charge distribution requires that \vec{E} be perpendicular to the line charge and directed outward as shown in Figure 24.12b. To reflect the symmetry of the charge distribution, let's choose a cylindrical gaussian surface of radius r and length ℓ that is coaxial with the line charge. For the curved part of this surface, \vec{E} is constant in magnitude and perpendicular to the surface at each point, satisfying conditions (1) and (2). Furthermore, the flux through the ends of the gaussian cylinder is zero because \vec{E} is parallel to these surfaces. That is the first application we have seen of condition (3).

We must take the surface integral in Gauss's law over the entire gaussian surface. Because $\vec{E} \cdot d\vec{A}$ is zero for the flat ends of the cylinder, however, we restrict our attention to only the curved surface of the cylinder.

Apply Gauss's law and conditions (1) and (2) for the curved surface, noting that the total charge inside our gaussian surface is $\lambda\ell$:

Substitute the area $A = 2\pi r\ell$ of the curved surface:

Solve for the magnitude of the electric field:

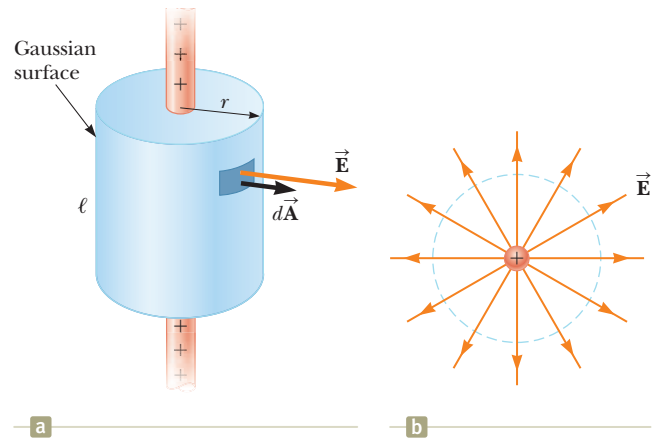


Figure 24.12 (Example 24.4) (a) An infinite line of charge surrounded by a cylindrical gaussian surface concentric with the line. (b) An end view shows that the electric field at the cylindrical surface is constant in magnitude and perpendicular to the surface.

$$\Phi_E = \oint \vec{E} \cdot d\vec{A} = E \oint dA = EA = \frac{q_{\text{in}}}{\epsilon_0} = \frac{\lambda\ell}{\epsilon_0}$$

$$E(2\pi r\ell) = \frac{\lambda\ell}{\epsilon_0}$$

$$E = \frac{\lambda}{2\pi\epsilon_0 r} = 2k_e \frac{\lambda}{r} \quad (24.7)$$

Finalize This result shows that the electric field due to a cylindrically symmetric charge distribution varies as $1/r$, whereas the field external to a spherically symmetric charge distribution varies as $1/r^2$. Equation 24.7 can also be derived by direct integration over the charge distribution. (See Problem 44 in Chapter 23.)

WHAT IF? What if the line segment in this example were not infinitely long?

Answer If the line charge in this example were of finite length, the electric field would not be given by Equation 24.7. A finite line charge does not possess sufficient symmetry to make use of Gauss's law because the magnitude of the electric field is no longer constant over the surface of the gaussian cylinder: the field near the ends of the line would be different from that far from the ends. Therefore, condition (1) would not be satisfied in this situation. Furthermore, \vec{E} is not perpendicular to the cylindrical surface at all points: the field vectors near the ends would have a component parallel to the line. Therefore, condition (2) would not be satisfied. For points close to a finite line charge and far from the ends, Equation 24.7 gives a good approximation of the value of the field.

It is left for you to show (see Problem 33) that the electric field inside a uniformly charged rod of finite radius and infinite length is proportional to r .

Example 24.5 A Plane of Charge

Find the electric field due to an infinite plane of positive charge with uniform surface charge density σ .

SOLUTION

Conceptualize Notice that the plane of charge is *infinitely* large. Therefore, the electric field should be the same at all points equidistant from the plane. How would you expect the electric field to depend on the distance from the plane?

Categorize Because the charge is distributed uniformly on the plane, the charge distribution is symmetric; hence, we can use Gauss's law to find the electric field.

Analyze By symmetry, \vec{E} must be perpendicular to the plane at all points. The direction of \vec{E} is away from positive charges, indicating that the direction of \vec{E} on one side of the plane must be opposite its direction on the other side as shown in Figure 24.13. A gaussian surface that reflects the symmetry is a small cylinder whose axis is perpendicular to the plane and whose ends each have an area A and are equidistant from the plane. Because \vec{E} is parallel to the curved surface of the cylinder—and therefore perpendicular to $d\vec{A}$ at all points on this surface—condition (3) is satisfied and there is no contribution to the surface integral from this surface. For the flat ends of the cylinder, conditions (1) and (2) are satisfied. The flux through each end of the cylinder is EA ; hence, the total flux through the entire gaussian surface is just that through the ends, $\Phi_E = 2EA$.

Write Gauss's law for this surface, noting that the enclosed charge is $q_{\text{in}} = \sigma A$:

$$\Phi_E = 2EA = \frac{q_{\text{in}}}{\epsilon_0} = \frac{\sigma A}{\epsilon_0}$$

Solve for E :

$$E = \frac{\sigma}{2\epsilon_0} \quad (24.8)$$

Finalize Because the distance from each flat end of the cylinder to the plane does not appear in Equation 24.8, we conclude that $E = \sigma/2\epsilon_0$ at *any* distance from the plane. That is, the field is uniform everywhere. Figure 24.14 shows this uniform field due to an infinite plane of charge, seen edge-on.

WHAT IF? Suppose two infinite planes of charge are parallel to each other, one positively charged and the other negatively charged. The surface charge densities of both planes are of the same magnitude. What does the electric field look like in this situation?

Answer We first addressed this configuration in the **What If?** section of Example 23.9. The electric fields due to the two planes add in the region between the planes, resulting in a uniform field of magnitude σ/ϵ_0 , and cancel elsewhere to give a field of zero. Figure 24.15 shows the field lines for such a configuration. This method is a practical way to achieve uniform electric fields with finite-sized planes placed close to each other.

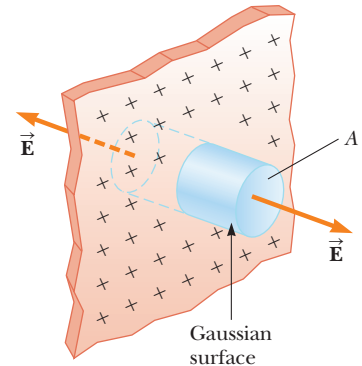


Figure 24.13 (Example 24.5) A cylindrical gaussian surface penetrating an infinite plane of charge. The flux is EA through each end of the gaussian surface and zero through its curved surface.

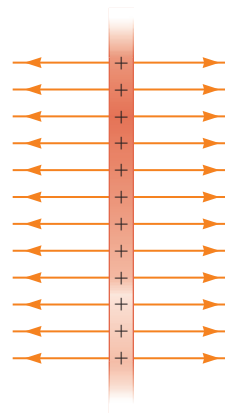


Figure 24.14 (Example 24.5) The electric field lines due to an infinite plane of positive charge.

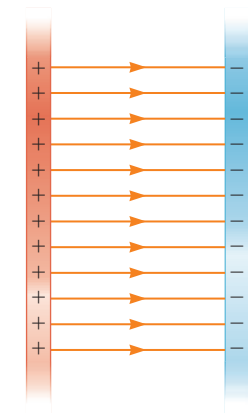


Figure 24.15 (Example 24.5) The electric field lines between two infinite planes of charge, one positive and one negative. In practice, the field lines near the edges of finite-sized sheets of charge will curve outward.

Conceptual Example 24.6 Don't Use Gauss's Law Here!

Explain why Gauss's law cannot be used to calculate the electric field near an electric dipole, a charged disk, or a triangle with a point charge at each corner.

► 24.6 continued

SOLUTION

The charge distributions of all these configurations do not have sufficient symmetry to make the use of Gauss's law practical. We cannot find a closed surface surrounding any of these distributions for which all portions of the surface satisfy one or more of conditions (1) through (4) listed at the beginning of this section.

24.4 Conductors in Electrostatic Equilibrium

As we learned in Section 23.2, a good electrical conductor contains charges (electrons) that are not bound to any atom and therefore are free to move about within the material. When there is no net motion of charge within a conductor, the conductor is in **electrostatic equilibrium**. A conductor in electrostatic equilibrium has the following properties:

1. The electric field is zero everywhere inside the conductor, whether the conductor is solid or hollow.
2. If the conductor is isolated and carries a charge, the charge resides on its surface.
3. The electric field at a point just outside a charged conductor is perpendicular to the surface of the conductor and has a magnitude σ/ϵ_0 , where σ is the surface charge density at that point.
4. On an irregularly shaped conductor, the surface charge density is greatest at locations where the radius of curvature of the surface is smallest.

We verify the first three properties in the discussion that follows. The fourth property is presented here (but not verified until we have studied the appropriate material in Chapter 25) to provide a complete list of properties for conductors in electrostatic equilibrium.

We can understand the first property by considering a conducting slab placed in an external field \vec{E} (Fig. 24.16). The electric field inside the conductor *must* be zero, assuming electrostatic equilibrium exists. If the field were not zero, free electrons in the conductor would experience an electric force ($\vec{F} = q\vec{E}$) and would accelerate due to this force. This motion of electrons, however, would mean that the conductor is not in electrostatic equilibrium. Therefore, the existence of electrostatic equilibrium is consistent only with a zero field in the conductor.

Let's investigate how this zero field is accomplished. Before the external field is applied, free electrons are uniformly distributed throughout the conductor. When the external field is applied, the free electrons accelerate to the left in Figure 24.16, causing a plane of negative charge to accumulate on the left surface. The movement of electrons to the left results in a plane of positive charge on the right surface. These planes of charge create an additional electric field inside the conductor that opposes the external field. As the electrons move, the surface charge densities on the left and right surfaces increase until the magnitude of the internal field equals that of the external field, resulting in a net field of zero inside the conductor. The time it takes a good conductor to reach equilibrium is on the order of 10^{-16} s, which for most purposes can be considered instantaneous.

If the conductor is hollow, the electric field inside the conductor is also zero, whether we consider points in the conductor or in the cavity within the conductor. The zero value of the electric field in the cavity is easiest to argue with the concept of electric potential, so we will address this issue in Section 25.6.

Gauss's law can be used to verify the second property of a conductor in electrostatic equilibrium. Figure 24.17 shows an arbitrarily shaped conductor. A gaussian

Properties of a conductor in electrostatic equilibrium

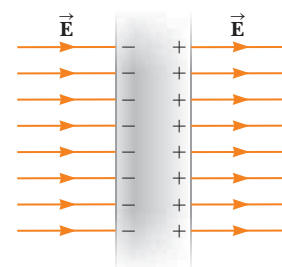


Figure 24.16 A conducting slab in an external electric field \vec{E} . The charges induced on the two surfaces of the slab produce an electric field that opposes the external field, giving a resultant field of zero inside the slab.

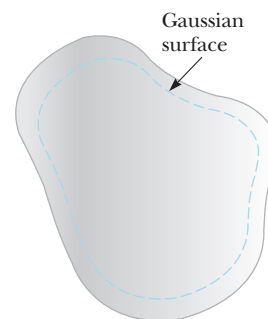


Figure 24.17 A conductor of arbitrary shape. The broken line represents a gaussian surface that can be just inside the conductor's surface.

surface is drawn inside the conductor and can be very close to the conductor's surface. As we have just shown, the electric field everywhere inside the conductor is zero when it is in electrostatic equilibrium. Therefore, the electric field must be zero at every point on the gaussian surface, in accordance with condition (4) in Section 24.3, and the net flux through this gaussian surface is zero. From this result and Gauss's law, we conclude that the net charge inside the gaussian surface is zero. Because there can be no net charge inside the gaussian surface (which is arbitrarily close to the conductor's surface), any net charge on the conductor must reside on its surface. Gauss's law does not indicate how this excess charge is distributed on the conductor's surface, only that it resides exclusively on the surface.

To verify the third property, let's begin with the perpendicularity of the field to the surface. If the field vector \vec{E} had a component parallel to the conductor's surface, free electrons would experience an electric force and move along the surface; in such a case, the conductor would not be in equilibrium. Therefore, the field vector must be perpendicular to the surface.

To determine the magnitude of the electric field, we use Gauss's law and draw a gaussian surface in the shape of a small cylinder whose end faces are parallel to the conductor's surface (Fig. 24.18). Part of the cylinder is just outside the conductor, and part is inside. The field is perpendicular to the conductor's surface from the condition of electrostatic equilibrium. Therefore, condition (3) in Section 24.3 is satisfied for the curved part of the cylindrical gaussian surface: there is no flux through this part of the gaussian surface because \vec{E} is parallel to the surface. There is no flux through the flat face of the cylinder inside the conductor because here $\vec{E} = 0$, which satisfies condition (4). Hence, the net flux through the gaussian surface is equal to that through only the flat face outside the conductor, where the field is perpendicular to the gaussian surface. Using conditions (1) and (2) for this face, the flux is EA , where E is the electric field just outside the conductor and A is the area of the cylinder's face. Applying Gauss's law to this surface gives

$$\Phi_E = \oint E \, dA = EA = \frac{q_{\text{in}}}{\epsilon_0} = \frac{\sigma A}{\epsilon_0}$$

where we have used $q_{\text{in}} = \sigma A$. Solving for E gives for the electric field immediately outside a charged conductor:

$$E = \frac{\sigma}{\epsilon_0} \quad (24.9)$$

- Quick Quiz 24.3** Your younger brother likes to rub his feet on the carpet and then touch you to give you a shock. While you are trying to escape the shock treatment, you discover a hollow metal cylinder in your basement, large enough to climb inside. In which of the following cases will you *not* be shocked? (a) You climb inside the cylinder, making contact with the inner surface, and your charged brother touches the outer metal surface. (b) Your charged brother is inside touching the inner metal surface and you are outside, touching the outer metal surface. (c) Both of you are outside the cylinder, touching its outer metal surface but not touching each other directly.

The flux through the gaussian surface is EA .

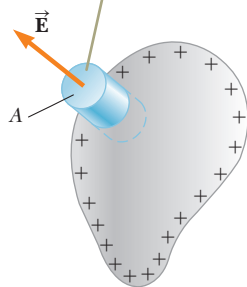


Figure 24.18 A gaussian surface in the shape of a small cylinder is used to calculate the electric field immediately outside a charged conductor.

Example 24.7

A Sphere Inside a Spherical Shell

A solid insulating sphere of radius a carries a net positive charge Q uniformly distributed throughout its volume. A conducting spherical shell of inner radius b and outer radius c is concentric with the solid sphere and carries a net charge $-2Q$. Using Gauss's law, find the electric field in the regions labeled ①, ②, ③, and ④ in Figure 24.19 and the charge distribution on the shell when the entire system is in electrostatic equilibrium.

24.7 continued

SOLUTION

Conceptualize Notice how this problem differs from Example 24.3. The charged sphere in Figure 24.10 appears in Figure 24.19, but it is now surrounded by a shell carrying a charge $-2Q$. Think about how the presence of the shell will affect the electric field of the sphere.

Categorize The charge is distributed uniformly throughout the sphere, and we know that the charge on the conducting shell distributes itself uniformly on the surfaces. Therefore, the system has spherical symmetry and we can apply Gauss's law to find the electric field in the various regions.

Analyze In region ②—between the surface of the solid sphere and the inner surface of the shell—we construct a spherical gaussian surface of radius r , where $a < r < b$, noting that the charge inside this surface is $+Q$ (the charge on the solid sphere). Because of the spherical symmetry, the electric field lines must be directed radially outward and be constant in magnitude on the gaussian surface.

The charge on the conducting shell creates zero electric field in the region $r < b$, so the shell has no effect on the field in region ② due to the sphere. Therefore, write an expression for the field in region ② as that due to the sphere from part (A) of Example 24.3:

$$E_2 = k_e \frac{Q}{r^2} \quad (\text{for } a < r < b)$$

Because the conducting shell creates zero field inside itself, it also has no effect on the field inside the sphere. Therefore, write an expression for the field in region ① as that due to the sphere from part (B) of Example 24.3:

$$E_1 = k_e \frac{Q}{a^3} r \quad (\text{for } r < a)$$

In region ④, where $r > c$, construct a spherical gaussian surface; this surface surrounds a total charge $q_{\text{in}} = Q + (-2Q) = -Q$. Therefore, model the charge distribution as a sphere with charge $-Q$ and write an expression for the field in region ④ from part (A) of Example 24.3:

$$E_4 = -k_e \frac{Q}{r^2} \quad (\text{for } r > c)$$

In region ③, the electric field must be zero because the spherical shell is a conductor in equilibrium:

$$E_3 = 0 \quad (\text{for } b < r < c)$$

Construct a gaussian surface of radius r in region ③, where $b < r < c$, and note that q_{in} must be zero because $E_3 = 0$. Find the amount of charge q_{inner} on the inner surface of the shell:

$$\begin{aligned} q_{\text{in}} &= q_{\text{sphere}} + q_{\text{inner}} \\ q_{\text{inner}} &= q_{\text{in}} - q_{\text{sphere}} = 0 - Q = -Q \end{aligned}$$

Finalize The charge on the inner surface of the spherical shell must be $-Q$ to cancel the charge $+Q$ on the solid sphere and give zero electric field in the material of the shell. Because the net charge on the shell is $-2Q$, its outer surface must carry a charge $-Q$.

WHAT IF? How would the results of this problem differ if the sphere were conducting instead of insulating?

Answer The only change would be in region ①, where $r < a$. Because there can be no charge inside a conductor in electrostatic equilibrium, $q_{\text{in}} = 0$ for a gaussian surface of radius $r < a$; therefore, on the basis of Gauss's law and symmetry, $E_1 = 0$. In regions ②, ③, and ④, there would be no way to determine from observations of the electric field whether the sphere is conducting or insulating.

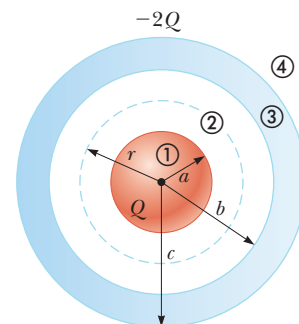


Figure 24.19 (Example 24.7) An insulating sphere of radius a and carrying a charge Q surrounded by a conducting spherical shell carrying a charge $-2Q$.

Summary

Definition

Electric flux is proportional to the number of electric field lines that penetrate a surface. If the electric field is uniform and makes an angle θ with the normal to a surface of area A , the electric flux through the surface is

$$\Phi_E = EA \cos \theta \quad (24.2)$$

In general, the electric flux through a surface is

$$\Phi_E \equiv \int_{\text{surface}} \vec{\mathbf{E}} \cdot d\vec{\mathbf{A}} \quad (24.3)$$

Concepts and Principles

Gauss's law says that the net electric flux Φ_E through any closed gaussian surface is equal to the *net* charge q_{in} inside the surface divided by ϵ_0 :

$$\Phi_E = \oint \vec{\mathbf{E}} \cdot d\vec{\mathbf{A}} = \frac{q_{\text{in}}}{\epsilon_0} \quad (24.6)$$

Using Gauss's law, you can calculate the electric field due to various symmetric charge distributions.

A conductor in **electrostatic equilibrium** has the following properties:

1. The electric field is zero everywhere inside the conductor, whether the conductor is solid or hollow.
2. If the conductor is isolated and carries a charge, the charge resides on its surface.
3. The electric field at a point just outside a charged conductor is perpendicular to the surface of the conductor and has a magnitude σ/ϵ_0 , where σ is the surface charge density at that point.
4. On an irregularly shaped conductor, the surface charge density is greatest at locations where the radius of curvature of the surface is smallest.

Objective Questions

1. denotes answer available in *Student Solutions Manual/Study Guide*

1. A cubical gaussian surface surrounds a long, straight, charged filament that passes perpendicularly through two opposite faces. No other charges are nearby. (i) Over how many of the cube's faces is the electric field zero? (a) 0 (b) 2 (c) 4 (d) 6 (ii) Through how many of the cube's faces is the electric flux zero? Choose from the same possibilities as in part (i).
2. A coaxial cable consists of a long, straight filament surrounded by a long, coaxial, cylindrical conducting shell. Assume charge Q is on the filament, zero net charge is on the shell, and the electric field is $E_1 \hat{\mathbf{i}}$ at a particular point P midway between the filament and the inner surface of the shell. Next, you place the cable into a uniform external field $-E_1 \hat{\mathbf{i}}$. What is the x component of the electric field at P then? (a) 0 (b) between 0 and E_1 (c) E_1 (d) between 0 and $-E_1$ (e) $-E_1$
3. In which of the following contexts can Gauss's law *not* be readily applied to find the electric field? (a) near a long, uniformly charged wire (b) above a large, uniformly charged plane (c) inside a uniformly charged ball (d) outside a uniformly charged sphere (e) Gauss's law can be readily applied to find the electric field in all these contexts.
4. A particle with charge q is located inside a cubical gaussian surface. No other charges are nearby. (i) If the particle is at the center of the cube, what is the flux through each one of the faces of the cube? (a) 0 (b) $q/2\epsilon_0$ (c) $q/6\epsilon_0$ (d) $q/8\epsilon_0$ (e) depends on the size of the cube (ii) If the particle can be moved to any point within the cube, what maximum value can the flux through one face approach? Choose from the same possibilities as in part (i).
5. Charges of 3.00 nC, -2.00 nC, -7.00 nC, and 1.00 nC are contained inside a rectangular box with length 1.00 m, width 2.00 m, and height 2.50 m. Outside the box are charges of 1.00 nC and 4.00 nC. What is the electric flux through the surface of the box? (a) 0 (b) $-5.64 \times 10^2 \text{ N} \cdot \text{m}^2/\text{C}$ (c) $-1.47 \times 10^3 \text{ N} \cdot \text{m}^2/\text{C}$ (d) $1.47 \times 10^3 \text{ N} \cdot \text{m}^2/\text{C}$ (e) $5.64 \times 10^2 \text{ N} \cdot \text{m}^2/\text{C}$
6. A large, metallic, spherical shell has no net charge. It is supported on an insulating stand and has a small hole at the top. A small tack with charge Q is lowered on a silk thread through the hole into the interior of the shell. (i) What is the charge on the inner surface of the shell, (a) Q (b) $Q/2$ (c) 0 (d) $-Q/2$ or (e) $-Q$? Choose your answers to the following questions from

the same possibilities. **(ii)** What is the charge on the outer surface of the shell? **(iii)** The tack is now allowed to touch the interior surface of the shell. After this contact, what is the charge on the tack? **(iv)** What is the charge on the inner surface of the shell now? **(v)** What is the charge on the outer surface of the shell now?

- Two solid spheres, both of radius 5 cm, carry identical total charges of $2 \mu\text{C}$. Sphere A is a good conductor. Sphere B is an insulator, and its charge is distributed uniformly throughout its volume. **(i)** How do the magnitudes of the electric fields they separately create at a radial distance of 6 cm compare? (a) $E_A > E_B = 0$ (b) $E_A > E_B > 0$ (c) $E_A = E_B > 0$ (d) $0 < E_A < E_B$ (e) $0 = E_A < E_B$ **(ii)** How do the magnitudes of the electric fields they separately create at radius 4 cm compare? Choose from the same possibilities as in part (i).
- A uniform electric field of 1.00 N/C is set up by a uniform distribution of charge in the xy plane. What is the electric field inside a metal ball placed 0.500 m above the xy plane? (a) 1.00 N/C (b) -1.00 N/C (c) 0 (d) 0.250 N/C (e) varies depending on the position inside the ball
- A solid insulating sphere of radius 5 cm carries electric charge uniformly distributed throughout its volume. Concentric with the sphere is a conducting spherical shell with no net charge as shown in Figure OQ24.9. The inner radius of the shell is 10 cm, and the outer radius is 15 cm. No other charges are nearby. (a) Rank

the magnitude of the electric field at points A (at radius 4 cm), B (radius 8 cm), C (radius 12 cm), and D (radius 16 cm) from largest to smallest. Display any cases of equality in your ranking. (b) Similarly rank the electric flux through concentric spherical surfaces through points A, B, C, and D.

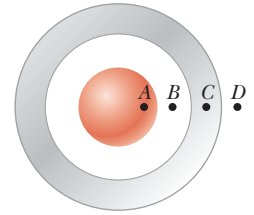


Figure OQ24.9

- A cubical gaussian surface is bisected by a large sheet of charge, parallel to its top and bottom faces. No other charges are nearby. **(i)** Over how many of the cube's faces is the electric field zero? (a) 0 (b) 2 (c) 4 (d) 6 **(ii)** Through how many of the cube's faces is the electric flux zero? Choose from the same possibilities as in part (i).
- Rank the electric fluxes through each gaussian surface shown in Figure OQ24.11 from largest to smallest. Display any cases of equality in your ranking.

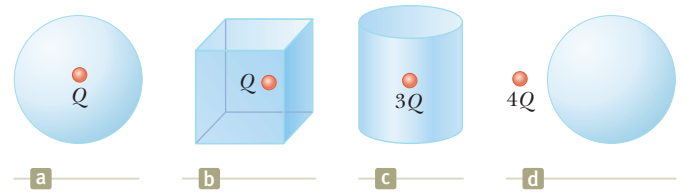


Figure OQ24.11

Conceptual Questions

I. denotes answer available in *Student Solutions Manual/Study Guide*

- Consider an electric field that is uniform in direction throughout a certain volume. Can it be uniform in magnitude? Must it be uniform in magnitude? Answer these questions (a) assuming the volume is filled with an insulating material carrying charge described by a volume charge density and (b) assuming the volume is empty space. State reasoning to prove your answers.
- A cubical surface surrounds a point charge q . Describe what happens to the total flux through the surface if (a) the charge is doubled, (b) the volume of the cube is doubled, (c) the surface is changed to a sphere, (d) the charge is moved to another location inside the surface, and (e) the charge is moved outside the surface.
- A uniform electric field exists in a region of space containing no charges. What can you conclude about the net electric flux through a gaussian surface placed in this region of space?
- If the total charge inside a closed surface is known but the distribution of the charge is unspecified, can you use Gauss's law to find the electric field? Explain.
- Explain why the electric flux through a closed surface with a given enclosed charge is independent of the size or shape of the surface.
- If more electric field lines leave a gaussian surface than enter it, what can you conclude about the net charge enclosed by that surface?
- A person is placed in a large, hollow, metallic sphere that is insulated from ground. (a) If a large charge is placed on the sphere, will the person be harmed upon touching the inside of the sphere? (b) Explain what will happen if the person also has an initial charge whose sign is opposite that of the charge on the sphere.
- Consider two identical conducting spheres whose surfaces are separated by a small distance. One sphere is given a large net positive charge, and the other is given a small net positive charge. It is found that the force between the spheres is attractive even though they both have net charges of the same sign. Explain how this attraction is possible.
- A common demonstration involves charging a rubber balloon, which is an insulator, by rubbing it on your hair and then touching the balloon to a ceiling or wall, which is also an insulator. Because of the electrical attraction between the charged balloon and the neutral wall, the balloon sticks to the wall. Imagine now that we have two infinitely large, flat sheets of insulating

material. One is charged, and the other is neutral. If these sheets are brought into contact, does an attractive force exist between them as there was for the balloon and the wall?

10. On the basis of the repulsive nature of the force between like charges and the freedom of motion of

charge within a conductor, explain why excess charge on an isolated conductor must reside on its surface.

11. The Sun is lower in the sky during the winter than it is during the summer. (a) How does this change affect the flux of sunlight hitting a given area on the surface of the Earth? (b) How does this change affect the weather?

Problems

WebAssign The problems found in this chapter may be assigned online in Enhanced WebAssign

1. straightforward; 2. intermediate; 3. challenging

1. full solution available in the *Student Solutions Manual/Study Guide*

AMT Analysis Model tutorial available in Enhanced WebAssign

GP Guided Problem

M Master It tutorial available in Enhanced WebAssign

W Watch It video solution available in Enhanced WebAssign

Section 24.1 Electric Flux

1. A flat surface of area 3.20 m^2 is rotated in a uniform electric field of magnitude $E = 6.20 \times 10^5 \text{ N/C}$. Determine the electric flux through this area (a) when the electric field is perpendicular to the surface and (b) when the electric field is parallel to the surface.

2. A vertical electric field of magnitude $2.00 \times 10^4 \text{ N/C}$ exists above the Earth's surface on a day when a thunderstorm is brewing. A car with a rectangular size of 6.00 m by 3.00 m is traveling along a dry gravel roadway sloping downward at 10.0° . Determine the electric flux through the bottom of the car.

3. A 40.0-cm -diameter circular loop is rotated in a uniform electric field until the position of maximum electric flux is found. The flux in this position is measured to be $5.20 \times 10^5 \text{ N} \cdot \text{m}^2/\text{C}$. What is the magnitude of the electric field?

4. Consider a closed triangular box resting within a horizontal electric field of magnitude $E = 7.80 \times 10^4 \text{ N/C}$ as shown in Figure P24.4. Calculate the electric flux through (a) the vertical rectangular surface, (b) the slanted surface, and (c) the entire surface of the box.

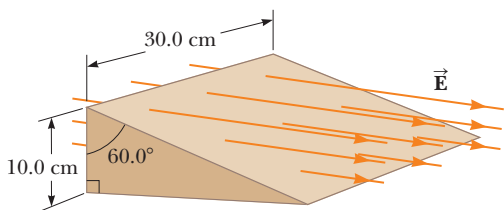


Figure P24.4

5. An electric field of magnitude 3.50 kN/C is applied along the x axis. Calculate the electric flux through a rectangular plane 0.350 m wide and 0.700 m long (a) if the plane is parallel to the yz plane, (b) if the plane is parallel to the xy plane, and (c) if the plane contains the y axis and its normal makes an angle of 40.0° with the x axis.

6. A nonuniform electric field is given by the expression

$$\vec{E} = ay\hat{i} + bz\hat{j} + cx\hat{k}$$

where a , b , and c are constants. Determine the electric flux through a rectangular surface in the xy plane, extending from $x = 0$ to $x = w$ and from $y = 0$ to $y = h$.

Section 24.2 Gauss's Law

7. An uncharged, nonconducting, hollow sphere of radius 10.0 cm surrounds a $10.0\text{-}\mu\text{C}$ charge located at the origin of a Cartesian coordinate system. A drill with a radius of 1.00 mm is aligned along the z axis, and a hole is drilled in the sphere. Calculate the electric flux through the hole.
8. Find the net electric flux through the spherical closed surface shown in Figure P24.8. The two charges on the right are inside the spherical surface.

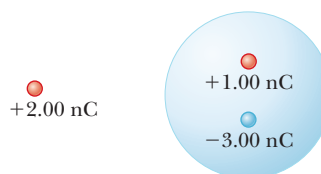


Figure P24.8

9. The following charges are located inside a submarine: $5.00 \mu\text{C}$, $-9.00 \mu\text{C}$, $27.0 \mu\text{C}$, and $-84.0 \mu\text{C}$. (a) Calculate the net electric flux through the hull of the submarine. (b) Is the number of electric field lines leaving the submarine greater than, equal to, or less than the number entering it?
10. The electric field everywhere on the surface of a thin, spherical shell of radius 0.750 m is of magnitude 890 N/C and points radially toward the center of the sphere. (a) What is the net charge within the sphere's surface? (b) What is the distribution of the charge inside the spherical shell?

11. Four closed surfaces, S_1 through S_4 , together with the charges $-2Q$, Q , and $-Q$ are sketched in Figure P24.11. (The colored lines are the intersections of the surfaces with the page.) Find the electric flux through each surface.

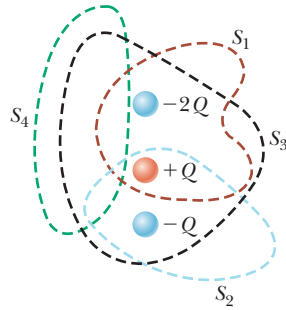


Figure P24.11

12. A charge of $170 \mu\text{C}$ is at the center of a cube of edge 80.0 cm . No other charges are nearby. (a) Find the flux through each face of the cube. (b) Find the flux through the whole surface of the cube. (c) **What If?** Would your answers to either part (a) or part (b) change if the charge were not at the center? Explain.
13. In the air over a particular region at an altitude of 500 m above the ground, the electric field is 120 N/C directed downward. At 600 m above the ground, the electric field is 100 N/C downward. What is the average volume charge density in the layer of air between these two elevations? Is it positive or negative?
14. A particle with charge of $12.0 \mu\text{C}$ is placed at the center of a spherical shell of radius 22.0 cm . What is the total electric flux through (a) the surface of the shell and (b) any hemispherical surface of the shell? (c) Do the results depend on the radius? Explain.

15. (a) Find the net electric flux through the cube shown in Figure P24.15. (b) Can you use Gauss's law to find the electric field on the surface of this cube? Explain.

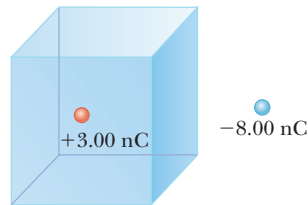


Figure P24.15

16. (a) A particle with charge q is located a distance d from an infinite plane. Determine the electric flux through the plane due to the charged particle. (b) **What If?** A particle with charge q is located a *very small* distance from the center of a *very large* square on the line perpendicular to the square and going through its center. Determine the approximate electric flux through the square due to the charged particle. (c) How do the answers to parts (a) and (b) compare? Explain.

17. An infinitely long line charge having a uniform charge per unit length λ lies a distance d from point O as shown in Figure P24.17. Determine the total electric flux through the surface of a sphere of radius R centered at O resulting from this line charge. Consider both cases, where (a) $R < d$ and (b) $R > d$.

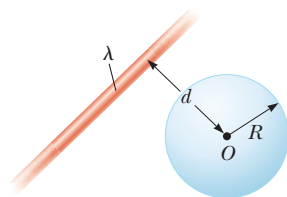


Figure P24.17

18. Find the net electric flux through (a) the closed spherical surface in a uniform electric field shown in Figure P24.18a and (b) the closed cylindrical surface shown in Figure P24.18b. (c) What can you conclude about the charges, if any, inside the cylindrical surface?

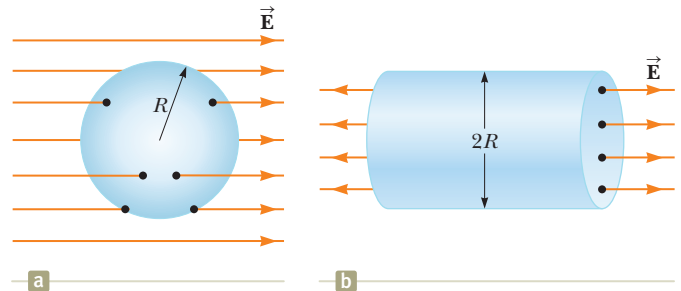


Figure P24.18

19. A particle with charge $Q = 5.00 \mu\text{C}$ is located at the center of a cube of edge $L = 0.100 \text{ m}$. In addition, six other identical charged particles having $q = -1.00 \mu\text{C}$ are positioned symmetrically around Q as shown in Figure P24.19. Determine the electric flux through one face of the cube.

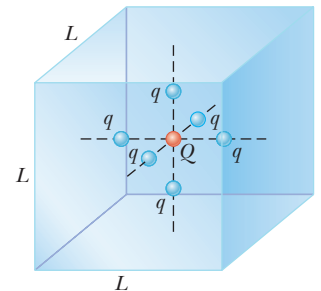


Figure P24.19

Problems 19 and 20.

20. A particle with charge Q is located at the center of a cube of edge L . In addition, six other identical charged particles q are positioned symmetrically around Q as shown in Figure P24.19. For each of these particles, q is a negative number. Determine the electric flux through one face of the cube.

21. A particle with charge Q is located a small distance δ immediately above the center of the flat face of a hemisphere of radius R as shown in Figure P24.21. What is the electric flux (a) through the curved surface and (b) through the flat face as $\delta \rightarrow 0$?

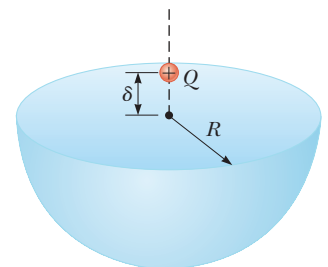


Figure P24.21

22. Figure P24.22 (page 742) represents the top view of a cubic gaussian surface in a uniform electric field \vec{E} oriented parallel to the top and bottom faces of the cube. The field makes an angle θ with side ①, and the area of each face is A . In symbolic form, find the electric flux through (a) face ①, (b) face ②, (c) face ③, (d) face ④, and (e) the top and bottom faces of the cube. (f) What

is the net electric flux through the cube? (g) How much charge is enclosed within the gaussian surface?

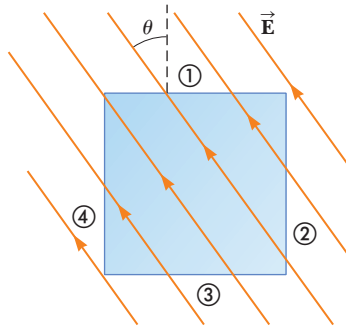


Figure P24.22

Section 24.3 Application of Gauss's Law to Various Charge Distributions

23. In nuclear fission, a nucleus of uranium-238, which contains 92 protons, can divide into two smaller spheres, each having 46 protons and a radius of 5.90×10^{-15} m. What is the magnitude of the repulsive electric force pushing the two spheres apart?

24. The charge per unit length on a long, straight filament is $-90.0 \mu\text{C}/\text{m}$. Find the electric field (a) 10.0 cm, (b) 20.0 cm, and (c) 100 cm from the filament, where distances are measured perpendicular to the length of the filament.

25. A 10.0-g piece of Styrofoam carries a net charge of $-0.700 \mu\text{C}$ and is suspended in equilibrium above the center of a large, horizontal sheet of plastic that has a uniform charge density on its surface. What is the charge per unit area on the plastic sheet?

26. Determine the magnitude of the electric field at the surface of a lead-208 nucleus, which contains 82 protons and 126 neutrons. Assume the lead nucleus has a volume 208 times that of one proton and consider a proton to be a sphere of radius 1.20×10^{-15} m.

27. A large, flat, horizontal sheet of charge has a charge per unit area of $9.00 \mu\text{C}/\text{m}^2$. Find the electric field just above the middle of the sheet.

28. Suppose you fill two rubber balloons with air, suspend both of them from the same point, and let them hang down on strings of equal length. You then rub each with wool or on your hair so that the balloons hang apart with a noticeable separation between them. Make order-of-magnitude estimates of (a) the force on each, (b) the charge on each, (c) the field each creates at the center of the other, and (d) the total flux of electric field created by each balloon. In your solution, state the quantities you take as data and the values you measure or estimate for them.

29. Consider a thin, spherical shell of radius 14.0 cm with a total charge of $32.0 \mu\text{C}$ distributed uniformly on its surface. Find the electric field (a) 10.0 cm and (b) 20.0 cm from the center of the charge distribution.

30. A nonconducting wall carries charge with a uniform density of $8.60 \mu\text{C}/\text{cm}^2$. (a) What is the electric field 7.00 cm in front of the wall if 7.00 cm is small compared

with the dimensions of the wall? (b) Does your result change as the distance from the wall varies? Explain.

31. A uniformly charged, straight filament 7.00 m in length has a total positive charge of $2.00 \mu\text{C}$. An uncharged cardboard cylinder 2.00 cm in length and 10.0 cm in radius surrounds the filament at its center, with the filament as the axis of the cylinder. Using reasonable approximations, find (a) the electric field at the surface of the cylinder and (b) the total electric flux through the cylinder.

32. Assume the magnitude of the electric field on each face of the cube of edge $L = 1.00$ m in Figure P24.32 is uniform and the directions of the fields on each face are as indicated. Find (a) the net electric flux through the cube and (b) the net charge inside the cube. (c) Could the net charge be a single point charge?

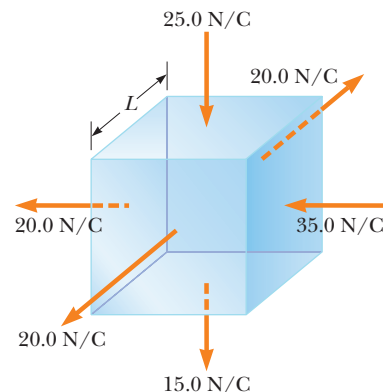


Figure P24.32

33. Consider a long, cylindrical charge distribution of radius R with a uniform charge density ρ . Find the electric field at distance r from the axis, where $r < R$.

34. A cylindrical shell of radius 7.00 cm and length 2.40 m has its charge uniformly distributed on its curved surface. The magnitude of the electric field at a point 19.0 cm radially outward from its axis (measured from the midpoint of the shell) is $36.0 \text{ kN}/\text{C}$. Find (a) the net charge on the shell and (b) the electric field at a point 4.00 cm from the axis, measured radially outward from the midpoint of the shell.

35. A solid sphere of radius 40.0 cm has a total positive charge of $26.0 \mu\text{C}$ uniformly distributed throughout its volume. Calculate the magnitude of the electric field (a) 0 cm, (b) 10.0 cm, (c) 40.0 cm, and (d) 60.0 cm from the center of the sphere.

36. Review. A particle with a charge of -60.0 nC is placed at the center of a nonconducting spherical shell of inner radius 20.0 cm and outer radius 25.0 cm. The spherical shell carries charge with a uniform density of $-1.33 \mu\text{C}/\text{m}^3$. A proton moves in a circular orbit just outside the spherical shell. Calculate the speed of the proton.

Section 24.4 Conductors in Electrostatic Equilibrium

37. A long, straight metal rod has a radius of 5.00 cm and a charge per unit length of $30.0 \text{ nC}/\text{m}$. Find the electric field (a) 3.00 cm, (b) 10.0 cm, and (c) 100 cm from the

axis of the rod, where distances are measured perpendicular to the rod's axis.

38. Why is the following situation impossible? A solid copper sphere of radius 15.0 cm is in electrostatic equilibrium and carries a charge of 40.0 nC. Figure P24.38 shows the magnitude of the electric field as a function of radial position r measured from the center of the sphere.

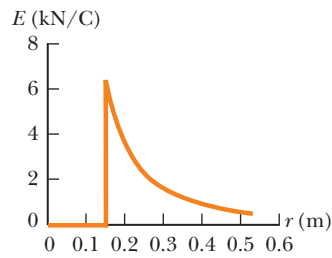


Figure P24.38

39. A solid metallic sphere of radius a carries total charge Q . No other charges are nearby. The electric field just outside its surface is $k_e Q/a^2$ radially outward. At this close point, the uniformly charged surface of the sphere looks exactly like a uniform flat sheet of charge. Is the electric field here given by σ/ϵ_0 or by $\sigma/2\epsilon_0$?
40. A positively charged particle is at a distance $R/2$ from the center of an uncharged thin, conducting, spherical shell of radius R . Sketch the electric field lines set up by this arrangement both inside and outside the shell.
41. A very large, thin, flat plate of aluminum of area A has a total charge Q uniformly distributed over its surfaces. Assuming the same charge is spread uniformly over the upper surface of an otherwise identical glass plate, compare the electric fields just above the center of the upper surface of each plate.
42. In a certain region of space, the electric field is $\vec{E} = 6.00 \times 10^3 x^2 \hat{i}$, where \vec{E} is in newtons per coulomb and x is in meters. Electric charges in this region are at rest and remain at rest. (a) Find the volume density of electric charge at $x = 0.300$ m. *Suggestion:* Apply Gauss's law to a box between $x = 0.300$ m and $x = 0.300$ m + dx . (b) Could this region of space be inside a conductor?
43. Two identical conducting spheres each having a radius of 0.500 cm are connected by a light, 2.00-m-long conducting wire. A charge of 60.0 μC is placed on one of the conductors. Assume the surface distribution of charge on each sphere is uniform. Determine the tension in the wire.
44. A square plate of copper with 50.0-cm sides has no net charge and is placed in a region of uniform electric field of 80.0 kN/C directed perpendicularly to the plate. Find (a) the charge density of each face of the plate and (b) the total charge on each face.
45. A long, straight wire is surrounded by a hollow metal cylinder whose axis coincides with that of the wire. The wire has a charge per unit length of λ , and the cylinder has a net charge per unit length of 2λ . From this information, use Gauss's law to find (a) the charge per unit length on the inner surface of the cylinder, (b) the charge per unit length on the outer surface of the cylinder, and (c) the electric field outside the cylinder a distance r from the axis.
46. A thin, square, conducting plate 50.0 cm on a side lies in the xy plane. A total charge of 4.00×10^{-8} C is placed

on the plate. Find (a) the charge density on each face of the plate, (b) the electric field just above the plate, and (c) the electric field just below the plate. You may assume the charge density is uniform.

47. A solid conducting sphere of radius 2.00 cm has a charge of 8.00 μC . A conducting spherical shell of inner radius 4.00 cm and outer radius 5.00 cm is concentric with the solid sphere and has a charge of $-4.00 \mu\text{C}$. Find the electric field at (a) $r = 1.00$ cm, (b) $r = 3.00$ cm, (c) $r = 4.50$ cm, and (d) $r = 7.00$ cm from the center of this charge configuration.

Additional Problems

48. Consider a plane surface in a uniform electric field as in Figure P24.48, where $d = 15.0$ cm and $\theta = 70.0^\circ$. If the net flux through the surface is $6.00 \text{ N} \cdot \text{m}^2/\text{C}$, find the magnitude of the electric field.

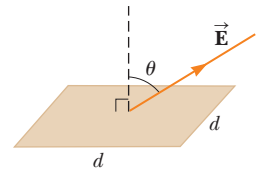


Figure P24.48

Problems 48 and 49.

49. Find the electric flux through the plane surface shown in Figure P24.48 if $\theta = 60.0^\circ$, $E = 350 \text{ N/C}$, and $d = 5.00$ cm. The electric field is uniform over the entire area of the surface.
50. A hollow, metallic, spherical shell has exterior radius 0.750 m, carries no net charge, and is supported on an insulating stand. The electric field everywhere just outside its surface is 890 N/C radially toward the center of the sphere. Explain what you can conclude about (a) the amount of charge on the exterior surface of the sphere and the distribution of this charge, (b) the amount of charge on the interior surface of the sphere and its distribution, and (c) the amount of charge inside the shell and its distribution.

51. A sphere of radius $R = 1.00$ m surrounds a particle with charge $Q = 50.0 \mu\text{C}$ located at its center as shown in Figure P24.51. Find the electric flux through a circular cap of half-angle $\theta = 45.0^\circ$.

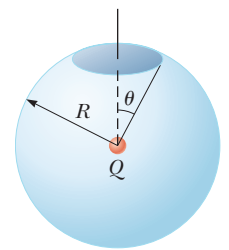


Figure P24.51

Problems 51 and 52.

52. A sphere of radius R surrounds a particle with charge Q located at its center as shown in Figure P24.51. Find the electric flux through a circular cap of half-angle θ .

53. A very large conducting plate lying in the xy plane carries a charge per unit area of σ . A second such plate located above the first plate at $z = z_0$ and oriented parallel to the xy plane carries a charge per unit area of -2σ . Find the electric field for (a) $z < 0$, (b) $0 < z < z_0$, and (c) $z > z_0$.

54. A solid, insulating sphere of radius a has a uniform charge density throughout its volume and a total charge Q . Concentric with this sphere is an uncharged, conducting, hollow sphere whose inner and outer radii are b and c as shown in Figure P24.54 (page 744). We wish to

understand completely the charges and electric fields at all locations. (a) Find the charge contained within a sphere of radius $r < a$. (b) From this value, find the magnitude of the electric field for $r < a$. (c) What charge is contained within a sphere of radius r when $a < r < b$? (d) From this value, find the magnitude of the electric field for r when $a < r < b$. (e) Now consider r when $b < r < c$. What is the magnitude of the electric field for this range of values of r ? (f) From this value, what must be the charge on the inner surface of the hollow sphere?

(g) From part (f), what must be the charge on the outer surface of the hollow sphere? (h) Consider the three spherical surfaces of radii a , b , and c . Which of these surfaces has the largest magnitude of surface charge density?

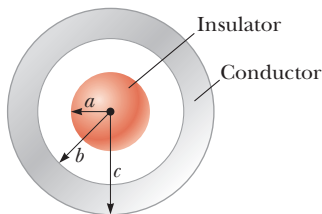


Figure P24.54

Problems 54, 55, and 57.

55. A solid insulating sphere of radius $a = 5.00$ cm carries a net positive charge of $Q = 3.00$ μC uniformly distributed throughout its volume. Concentric with this sphere is a conducting spherical shell with inner radius $b = 10.0$ cm and outer radius $c = 15.0$ cm as shown in Figure P24.54, having net charge $q = -1.00$ μC . Prepare a graph of the magnitude of the electric field due to this configuration versus r for $0 < r < 25.0$ cm.

56. Two infinite, nonconducting sheets of charge are parallel to each other as shown in Figure P24.56. The sheet on the left has a uniform surface charge density σ , and the one on the right has a uniform charge density $-\sigma$. Calculate the electric field at points (a) to the left of, (b) in between, and (c) to the right of the two sheets. (d) **What If?** Find the electric fields in all three regions if both sheets have positive uniform surface charge densities of value σ .

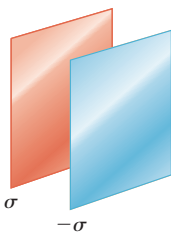


Figure P24.56

57. For the configuration shown in Figure P24.54, suppose $a = 5.00$ cm, $b = 20.0$ cm, and $c = 25.0$ cm. Furthermore, suppose the electric field at a point 10.0 cm from the center is measured to be 3.60×10^3 N/C radially inward and the electric field at a point 50.0 cm from the center is of magnitude 200 N/C and points radially outward. From this information, find (a) the charge on the insulating sphere, (b) the net charge on the hollow conducting sphere, (c) the charge on the inner surface of the hollow conducting sphere, and (d) the charge on the outer surface of the hollow conducting sphere.

58. An insulating solid sphere of radius a has a uniform volume charge density and carries a total positive charge Q . A spherical gaussian surface of radius r , which shares a common center with the insulating sphere, is inflated starting from $r = 0$. (a) Find an expression for the electric flux passing through the surface of the gaussian sphere as a function of r for $r < a$. (b) Find an expression for the electric flux for $r > a$. (c) Plot the flux versus r .

59. A uniformly charged spherical shell with positive surface charge density σ contains a circular hole in its surface. The radius r of the hole is small compared with the radius R of the sphere. What is the electric field at the center of the hole? *Suggestion:* This problem can be solved by using the principle of superposition.

60. An infinitely long, cylindrical, insulating shell of inner radius a and outer radius b has a uniform volume charge density ρ . A line of uniform linear charge density λ is placed along the axis of the shell. Determine the electric field for (a) $r < a$, (b) $a < r < b$, and (c) $r > b$.

Challenge Problems

61. A slab of insulating material has a nonuniform positive charge density $\rho = Cx^2$, where x is measured from the center of the slab as shown in Figure P24.61 and C is a constant. The slab is infinite in the y and z directions. Derive expressions for the electric field in (a) the exterior regions ($|x| > d/2$) and (b) the interior region of the slab ($-d/2 < x < d/2$).

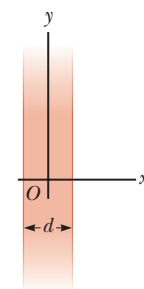


Figure P24.61

Problems 61 and 69.

62. **Review.** An early (incorrect) model of the hydrogen atom, suggested by J. J. Thomson, proposed that a positive cloud of charge $+e$ was uniformly distributed throughout the volume of a sphere of radius R , with the electron (an equal-magnitude negatively charged particle $-e$) at the center. (a) Using Gauss's law, show that the electron would be in equilibrium at the center and, if displaced from the center a distance $r < R$, would experience a restoring force of the form $F = -Kr$, where K is a constant. (b) Show that $K = k_e e^2 / R^3$. (c) Find an expression for the frequency f of simple harmonic oscillations that an electron of mass m_e would undergo if displaced a small distance ($< R$) from the center and released. (d) Calculate a numerical value for R that would result in a frequency of 2.47×10^{15} Hz, the frequency of the light radiated in the most intense line in the hydrogen spectrum.

63. A closed surface with dimensions $a = b = 0.400$ m and $c = 0.600$ m is located as shown in Figure P24.63. The left edge of the closed surface is located at position $x = a$. The electric field throughout the region is non-uniform and is given by $\vec{E} = (3.00 + 2.00x^2)\hat{i}$ N/C, where x is in meters. (a) Calculate the net electric flux

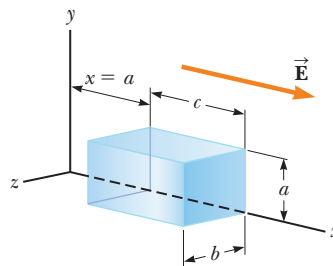


Figure P24.63

leaving the closed surface. (b) What net charge is enclosed by the surface?

64. A sphere of radius $2a$ is made of a nonconducting material that has a uniform volume charge density ρ . Assume the material does not affect the electric field. A spherical cavity of radius a is now removed from the sphere as shown in Figure P24.64. Show that the electric field within the cavity is uniform and is given by $E_x = 0$ and $E_y = \rho a/3\epsilon_0$.

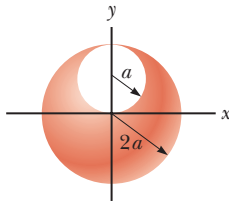


Figure P24.64

65. A spherically symmetric charge distribution has a charge density given by $\rho = a/r$, where a is constant. Find the electric field within the charge distribution as a function of r . *Note:* The volume element dV for a spherical shell of radius r and thickness dr is equal to $4\pi r^2 dr$.
66. A solid insulating sphere of radius R has a nonuniform charge density that varies with r according to the expression $\rho = Ar^2$, where A is a constant and $r < R$ is measured from the center of the sphere. (a) Show that the magnitude of the electric field outside ($r > R$) the sphere is $E = AR^5/5\epsilon_0 r^2$. (b) Show that the magnitude of the electric field inside ($r < R$) the sphere is $E = Ar^3/5\epsilon_0$. *Note:* The volume element dV for a spherical shell of radius r and thickness dr is equal to $4\pi r^2 dr$.

67. An infinitely long insulating cylinder of radius R has a volume charge density that varies with the radius as

$$\rho = \rho_0 \left(a - \frac{r}{b} \right)$$

where ρ_0 , a , and b are positive constants and r is the distance from the axis of the cylinder. Use Gauss's law to determine the magnitude of the electric field at radial distances (a) $r < R$ and (b) $r > R$.

68. A particle with charge Q is located on the axis of a circle of radius R at a distance b from the plane of the circle (Fig. P24.68). Show that if one-fourth of the electric flux from the charge passes through the circle, then $R = \sqrt{3}b$.

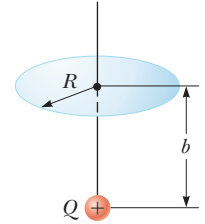


Figure P24.68

69. **Review.** A slab of insulating material (infinite in the y and z directions) has a thickness d and a uniform positive charge density ρ . An edge view of the slab is shown in Figure P24.61. (a) Show that the magnitude of the electric field a distance x from its center and inside the slab is $E = \rho x/\epsilon_0$. (b) **What If?** Suppose an electron of charge $-e$ and mass m_e can move freely within the slab. It is released from rest at a distance x from the center. Show that the electron exhibits simple harmonic motion with a frequency

$$f = \frac{1}{2\pi} \sqrt{\frac{\rho e}{m_e \epsilon_0}}$$

Electric Potential

- 25.1 Electric Potential and Potential Difference
- 25.2 Potential Difference in a Uniform Electric Field
- 25.3 Electric Potential and Potential Energy Due to Point Charges
- 25.4 Obtaining the Value of the Electric Field from the Electric Potential
- 25.5 Electric Potential Due to Continuous Charge Distributions
- 25.6 Electric Potential Due to a Charged Conductor
- 25.7 The Millikan Oil-Drop Experiment
- 25.8 Applications of Electrostatics



Processes occurring during thunderstorms cause large differences in electric potential between a thundercloud and the ground. The result of this potential difference is an electrical discharge that we call lightning, such as this display. Notice at the left that a downward channel of lightning (a *stepped leader*) is about to make contact with a channel coming up from the ground (a *return stroke*).
(Costazzurra/Shutterstock.com)

In Chapter 23, we linked our new study of electromagnetism to our earlier studies of *force*. Now we make a new link to our earlier investigations into *energy*. The concept of potential energy was introduced in Chapter 7 in connection with such conservative forces as the gravitational force and the elastic force exerted by a spring. By using the law of conservation of energy, we could solve various problems in mechanics that were not solvable with an approach using forces. The concept of potential energy is also of great value in the study of electricity. Because the electrostatic force is conservative, electrostatic phenomena can be conveniently described in terms of an electric potential energy. This idea enables us to define a quantity known as *electric potential*. Because the electric potential at any point in an electric field is a scalar quantity, we can use it to describe electrostatic phenomena more simply than if we were to rely only on the electric field and electric forces. The concept of electric potential is of great practical value in the operation of electric circuits and devices that we will study in later chapters.

25.1 Electric Potential and Potential Difference

When a charge q is placed in an electric field \vec{E} created by some source charge distribution, the particle in a field model tells us that there is an electric force $q\vec{E}$

acting on the charge. This force is conservative because the force between charges described by Coulomb's law is conservative. Let us identify the charge and the field as a system. If the charge is free to move, it will do so in response to the electric force. Therefore, the electric field will be doing work on the charge. This work is *internal* to the system. This situation is similar to that in a gravitational system: When an object is released near the surface of the Earth, the gravitational force does work on the object. This work is internal to the object–Earth system as discussed in Sections 7.7 and 7.8.

When analyzing electric and magnetic fields, it is common practice to use the notation $d\vec{s}$ to represent an infinitesimal displacement vector that is oriented tangent to a path through space. This path may be straight or curved, and an integral performed along this path is called either a *path integral* or a *line integral* (the two terms are synonymous).

For an infinitesimal displacement $d\vec{s}$ of a point charge q immersed in an electric field, the work done within the charge–field system by the electric field on the charge is $W_{\text{int}} = \vec{F}_e \cdot d\vec{s} = q\vec{E} \cdot d\vec{s}$. Recall from Equation 7.26 that internal work done in a system is equal to the negative of the change in the potential energy of the system: $W_{\text{int}} = -\Delta U$. Therefore, as the charge q is displaced, the electric potential energy of the charge–field system is changed by an amount $dU = -W_{\text{int}} = -q\vec{E} \cdot d\vec{s}$. For a finite displacement of the charge from some point \textcircled{A} in space to some other point \textcircled{B} , the change in electric potential energy of the system is

$$\Delta U = -q \int_{\textcircled{A}}^{\textcircled{B}} \vec{E} \cdot d\vec{s} \quad (25.1)$$

The integration is performed along the path that q follows as it moves from \textcircled{A} to \textcircled{B} . Because the force $q\vec{E}$ is conservative, this line integral does not depend on the path taken from \textcircled{A} to \textcircled{B} .

For a given position of the charge in the field, the charge–field system has a potential energy U relative to the configuration of the system that is defined as $U = 0$. Dividing the potential energy by the charge gives a physical quantity that depends only on the source charge distribution and has a value at every point in an electric field. This quantity is called the **electric potential** (or simply the **potential**) V :

$$V = \frac{U}{q} \quad (25.2)$$

Because potential energy is a scalar quantity, electric potential also is a scalar quantity.

The **potential difference** $\Delta V = V_{\textcircled{B}} - V_{\textcircled{A}}$ between two points \textcircled{A} and \textcircled{B} in an electric field is defined as the change in electric potential energy of the system when a charge q is moved between the points (Eq. 25.1) divided by the charge:

$$\Delta V \equiv \frac{\Delta U}{q} = - \int_{\textcircled{A}}^{\textcircled{B}} \vec{E} \cdot d\vec{s} \quad (25.3)$$

In this definition, the infinitesimal displacement $d\vec{s}$ is interpreted as the displacement between two points in space rather than the displacement of a point charge as in Equation 25.1.

Just as with potential energy, only *differences* in electric potential are meaningful. We often take the value of the electric potential to be zero at some convenient point in an electric field.

Potential difference should not be confused with difference in potential energy. The potential *difference* between \textcircled{A} and \textcircled{B} exists solely because of a source charge and depends on the source charge distribution (consider points \textcircled{A} and \textcircled{B} in the discussion above *without* the presence of the charge q). For a potential *energy* to exist, we must have a system of two or more charges. The potential

◀ Change in electric potential energy of a system

Pitfall Prevention 25.1

Potential and Potential Energy

The *potential* is characteristic of the field only, independent of a charged particle that may be placed in the field. *Potential energy* is characteristic of the charge–field system due to an interaction between the field and a charged particle placed in the field.

◀ Potential difference between two points

Pitfall Prevention 25.2

Voltage A variety of phrases are used to describe the potential difference between two points, the most common being **voltage**, arising from the unit for potential. A voltage *applied* to a device, such as a television, or *across* a device is the same as the potential difference across the device. Despite popular language, voltage is *not* something that moves *through* a device.

Pitfall Prevention 25.3

The Electron Volt The electron volt is a unit of *energy*, NOT of potential. The energy of any system may be expressed in eV, but this unit is most convenient for describing the emission and absorption of visible light from atoms. Energies of nuclear processes are often expressed in MeV.

energy belongs to the system and changes only if a charge is moved relative to the rest of the system. This situation is similar to that for the electric field. An electric *field* exists solely because of a source charge. An electric *force* requires two charges: the source charge to set up the field and another charge placed within that field.

Let's now consider the situation in which an external agent moves the charge in the field. If the agent moves the charge from Ⓐ to Ⓑ without changing the kinetic energy of the charge, the agent performs work that changes the potential energy of the system: $W = \Delta U$. From Equation 25.3, the work done by an external agent in moving a charge q through an electric field at constant velocity is

$$W = q \Delta V \quad (25.4)$$

Because electric potential is a measure of potential energy per unit charge, the SI unit of both electric potential and potential difference is joules per coulomb, which is defined as a **volt** (V):

$$1 \text{ V} \equiv 1 \text{ J/C}$$

That is, as we can see from Equation 25.4, 1 J of work must be done to move a 1-C charge through a potential difference of 1 V.

Equation 25.3 shows that potential difference also has units of electric field times distance. It follows that the SI unit of electric field (N/C) can also be expressed in volts per meter:

$$1 \text{ N/C} = 1 \text{ V/m}$$

Therefore, we can state a new interpretation of the electric field:

The electric field is a measure of the rate of change of the electric potential with respect to position.

A unit of energy commonly used in atomic and nuclear physics is the **electron volt** (eV), which is defined as the energy a charge–field system gains or loses when a charge of magnitude e (that is, an electron or a proton) is moved through a potential difference of 1 V. Because $1 \text{ V} = 1 \text{ J/C}$ and the fundamental charge is equal to $1.60 \times 10^{-19} \text{ C}$, the electron volt is related to the joule as follows:

$$1 \text{ eV} = 1.60 \times 10^{-19} \text{ C} \cdot \text{V} = 1.60 \times 10^{-19} \text{ J} \quad (25.5)$$

For instance, an electron in the beam of a typical dental x-ray machine may have a speed of $1.4 \times 10^8 \text{ m/s}$. This speed corresponds to a kinetic energy $1.1 \times 10^{-14} \text{ J}$ (using relativistic calculations as discussed in Chapter 39), which is equivalent to $6.7 \times 10^4 \text{ eV}$. Such an electron has to be accelerated from rest through a potential difference of 67 kV to reach this speed.

- Quick Quiz 25.1** In Figure 25.1, two points Ⓐ and Ⓑ are located within a region in which there is an electric field. (i) How would you describe the potential difference $\Delta V = V_{\text{Ⓑ}} - V_{\text{Ⓐ}}$? (a) It is positive. (b) It is negative. (c) It is zero. (ii) A negative charge is placed at Ⓐ and then moved to Ⓑ. How would you describe the change in potential energy of the charge–field system for this process? Choose from the same possibilities.

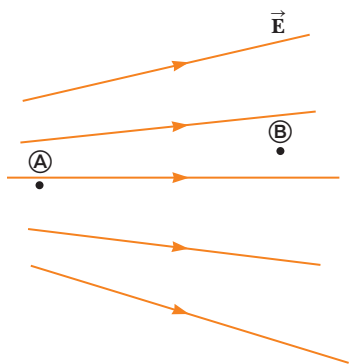


Figure 25.1 (Quick Quiz 25.1) Two points in an electric field.

25.2 Potential Difference in a Uniform Electric Field

Equations 25.1 and 25.3 hold in all electric fields, whether uniform or varying, but they can be simplified for the special case of a uniform field. First, consider a uniform electric field directed along the negative y axis as shown in Figure 25.2a. Let's calculate the potential difference between two points Ⓐ and Ⓑ separated by a dis-

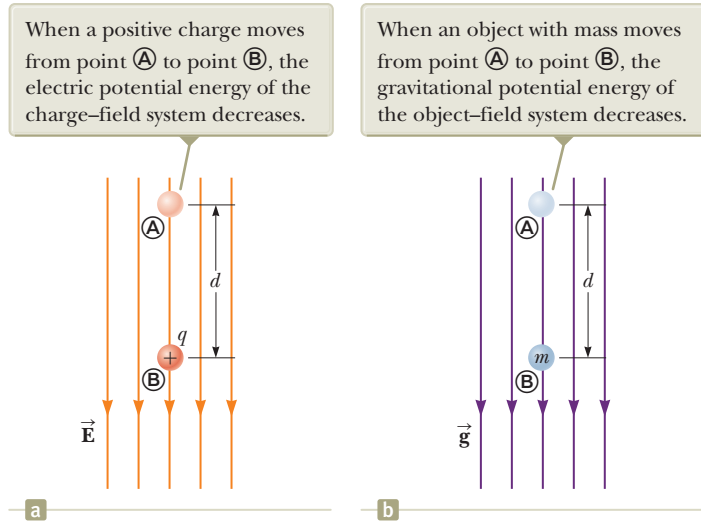


Figure 25.2 (a) When the electric field \vec{E} is directed downward, point \textcircled{B} is at a lower electric potential than point \textcircled{A} . (b) A gravitational analog to the situation in (a).

tance d , where the displacement \vec{s} points from \textcircled{A} toward \textcircled{B} and is parallel to the field lines. Equation 25.3 gives

$$V_{\textcircled{B}} - V_{\textcircled{A}} = \Delta V = -\int_{\textcircled{A}}^{\textcircled{B}} \vec{E} \cdot d\vec{s} = -\int_{\textcircled{A}}^{\textcircled{B}} E ds (\cos 0^\circ) = -\int_{\textcircled{A}}^{\textcircled{B}} E ds$$

Because E is constant, it can be removed from the integral sign, which gives

$$\Delta V = -E \int_{\textcircled{A}}^{\textcircled{B}} ds$$

$$\Delta V = -Ed \quad (25.6)$$

The negative sign indicates that the electric potential at point \textcircled{B} is lower than at point \textcircled{A} ; that is, $V_{\textcircled{B}} < V_{\textcircled{A}}$. Electric field lines *always* point in the direction of decreasing electric potential as shown in Figure 25.2a.

Now suppose a charge q moves from \textcircled{A} to \textcircled{B} . We can calculate the change in the potential energy of the charge–field system from Equations 25.3 and 25.6:

$$\Delta U = q \Delta V = -qEd \quad (25.7)$$

This result shows that if q is positive, then ΔU is negative. Therefore, in a system consisting of a positive charge and an electric field, the electric potential energy of the system decreases when the charge moves in the direction of the field. If a positive charge is released from rest in this electric field, it experiences an electric force $q\vec{E}$ in the direction of \vec{E} (downward in Fig. 25.2a). Therefore, it accelerates downward, gaining kinetic energy. As the charged particle gains kinetic energy, the electric potential energy of the charge–field system decreases by an equal amount. This equivalence should not be surprising; it is simply conservation of mechanical energy in an isolated system as introduced in Chapter 8.

Figure 25.2b shows an analogous situation with a gravitational field. When a particle with mass m is released in a gravitational field, it accelerates downward, gaining kinetic energy. At the same time, the gravitational potential energy of the object–field system decreases.

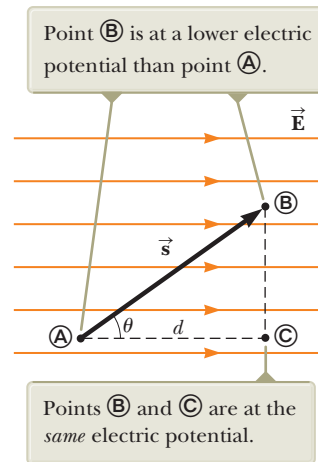
The comparison between a system of a positive charge residing in an electrical field and an object with mass residing in a gravitational field in Figure 25.2 is useful for conceptualizing electrical behavior. The electrical situation, however, has one feature that the gravitational situation does not: the charge can be negative. If q is negative, then ΔU in Equation 25.7 is positive and the situation is reversed.

◀ **Potential difference between two points in a uniform electric field**

Pitfall Prevention 25.4

The Sign of ΔV The negative sign in Equation 25.6 is due to the fact that we started at point \textcircled{A} and moved to a new point in the *same* direction as the electric field lines. If we started from \textcircled{B} and moved to \textcircled{A} , the potential difference would be $+Ed$. In a uniform electric field, the magnitude of the potential difference is Ed and the sign can be determined by the direction of travel.

Figure 25.3 A uniform electric field directed along the positive x axis. Three points in the electric field are labeled.



A system consisting of a negative charge and an electric field *gains* electric potential energy when the charge moves in the direction of the field. If a negative charge is released from rest in an electric field, it accelerates in a direction *opposite* the direction of the field. For the negative charge to move in the direction of the field, an external agent must apply a force and do positive work on the charge.

Now consider the more general case of a charged particle that moves between A and B in a uniform electric field such that the vector \vec{s} is *not* parallel to the field lines as shown in Figure 25.3. In this case, Equation 25.3 gives

$$\Delta V = - \int_{\text{A}}^{\text{B}} \vec{E} \cdot d\vec{s} = - \vec{E} \cdot \int_{\text{A}}^{\text{B}} d\vec{s} = - \vec{E} \cdot \vec{s} \quad (25.8)$$

where again \vec{E} was removed from the integral because it is constant. The change in potential energy of the charge–field system is

$$\Delta U = q\Delta V = -q\vec{E} \cdot \vec{s} \quad (25.9)$$

Finally, we conclude from Equation 25.8 that all points in a plane perpendicular to a uniform electric field are at the same electric potential. We can see that in Figure 25.3, where the potential difference $V_{\text{B}} - V_{\text{A}}$ is equal to the potential difference $V_{\text{C}} - V_{\text{A}}$. (Prove this fact to yourself by working out two dot products for $\vec{E} \cdot \vec{s}$: one for $\vec{s}_{\text{A} \rightarrow \text{B}}$, where the angle θ between \vec{E} and \vec{s} is arbitrary as shown in Figure 25.3, and one for $\vec{s}_{\text{A} \rightarrow \text{C}}$, where $\theta = 0$.) Therefore, $V_{\text{B}} = V_{\text{C}}$. The name **equipotential surface** is given to any surface consisting of a continuous distribution of points having the same electric potential.

The equipotential surfaces associated with a uniform electric field consist of a family of parallel planes that are all perpendicular to the field. Equipotential surfaces associated with fields having other symmetries are described in later sections.

Quick Quiz 25.2 The labeled points in Figure 25.4 are on a series of equipotential surfaces associated with an electric field. Rank (from greatest to least) the work done by the electric field on a positively charged particle that moves from

- A to B, from B to C, from C to D, and from D to E.

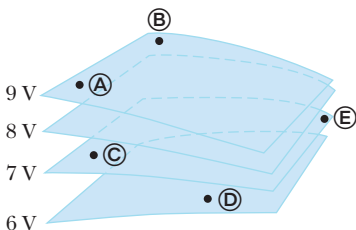


Figure 25.4 (Quick Quiz 25.2) Four equipotential surfaces.

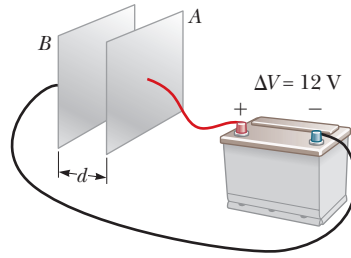
Example 25.1

The Electric Field Between Two Parallel Plates of Opposite Charge

A battery has a specified potential difference ΔV between its terminals and establishes that potential difference between conductors attached to the terminals. A 12-V battery is connected between two parallel plates as shown in Figure 25.5. The separation between the plates is $d = 0.30$ cm, and we assume the electric field between the plates to be uniform. (This assumption is reasonable if the plate separation is small relative to the plate dimensions and we do not consider locations near the plate edges.) Find the magnitude of the electric field between the plates.

25.1 continued

Figure 25.5 (Example 25.1) A 12-V battery connected to two parallel plates. The electric field between the plates has a magnitude given by the potential difference ΔV divided by the plate separation d .



SOLUTION

Conceptualize In Example 24.5, we illustrated the uniform electric field between parallel plates. The new feature to this problem is that the electric field is related to the new concept of electric potential.

Categorize The electric field is evaluated from a relationship between field and potential given in this section, so we categorize this example as a substitution problem.

Use Equation 25.6 to evaluate the magnitude of the electric field between the plates:

$$E = \frac{|V_B - V_A|}{d} = \frac{12 \text{ V}}{0.30 \times 10^{-2} \text{ m}} = 4.0 \times 10^3 \text{ V/m}$$

The configuration of plates in Figure 25.5 is called a *parallel-plate capacitor* and is examined in greater detail in Chapter 26.

Example 25.2 Motion of a Proton in a Uniform Electric Field

AM

A proton is released from rest at point **A** in a uniform electric field that has a magnitude of $8.0 \times 10^4 \text{ V/m}$ (Fig. 25.6). The proton undergoes a displacement of magnitude $d = 0.50 \text{ m}$ to point **B** in the direction of \vec{E} . Find the speed of the proton after completing the displacement.

SOLUTION

Conceptualize Visualize the proton in Figure 25.6 moving downward through the potential difference. The situation is analogous to an object falling through a gravitational field. Also compare this example to Example 23.10 where a positive charge was moving in a uniform electric field. In that example, we applied the particle under constant acceleration and nonisolated system models. Now that we have investigated electric potential energy, what model can we use here?

Categorize The system of the proton and the two plates in Figure 25.6 does not interact with the environment, so we model it as an *isolated system for energy*.

Analyze

Write the appropriate reduction of Equation 8.2, the conservation of energy equation, for the isolated system of the charge and the electric field:

$$\Delta K + \Delta U = 0$$

Substitute the changes in energy for both terms:

$$\left(\frac{1}{2}mv^2 - 0\right) + e\Delta V = 0$$

Solve for the final speed of the proton and substitute for ΔV from Equation 25.6:

$$v = \sqrt{\frac{-2e\Delta V}{m}} = \sqrt{\frac{-2e(-Ed)}{m}} = \sqrt{\frac{2eEd}{m}}$$

Substitute numerical values:

$$v = \sqrt{\frac{2(1.6 \times 10^{-19} \text{ C})(8.0 \times 10^4 \text{ V})(0.50 \text{ m})}{1.67 \times 10^{-27} \text{ kg}}} \\ = 2.8 \times 10^6 \text{ m/s}$$

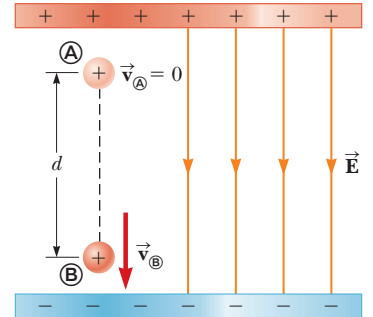


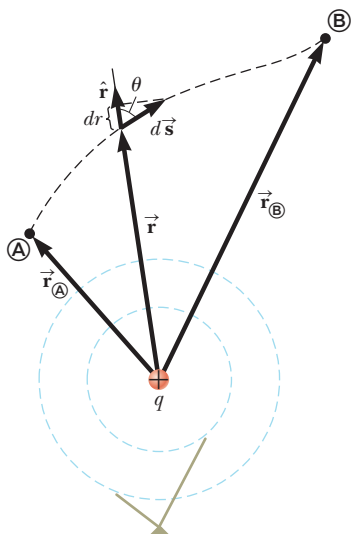
Figure 25.6 (Example 25.2) A proton accelerates from **A** to **B** in the direction of the electric field.

continued

25.2 continued

Finalize Because ΔV is negative for the field, ΔU is also negative for the proton–field system. The negative value of ΔU means the potential energy of the system decreases as the proton moves in the direction of the electric field. As the proton accelerates in the direction of the field, it gains kinetic energy while the electric potential energy of the system decreases at the same time.

Figure 25.6 is oriented so that the proton moves downward. The proton's motion is analogous to that of an object falling in a gravitational field. Although the gravitational field is always downward at the surface of the Earth, an electric field can be in any direction, depending on the orientation of the plates creating the field. Therefore, Figure 25.6 could be rotated 90° or 180° and the proton could move horizontally or upward in the electric field!



The two dashed circles represent intersections of spherical equipotential surfaces with the page.

Figure 25.7 The potential difference between points **A** and **B** due to a point charge q depends *only* on the initial and final radial coordinates r_A and r_B .

Pitfall Prevention 25.5

Similar Equation Warning Do not confuse Equation 25.11 for the electric potential of a point charge with Equation 23.9 for the electric field of a point charge. Potential is proportional to $1/r$, whereas the magnitude of the field is proportional to $1/r^2$. The effect of a charge on the space surrounding it can be described in two ways. The charge sets up a vector electric field \vec{E} , which is related to the force experienced by a charge placed in the field. It also sets up a scalar potential V , which is related to the potential energy of the two-charge system when a charge is placed in the field.

25.3 Electric Potential and Potential Energy Due to Point Charges

As discussed in Section 23.4, an isolated positive point charge q produces an electric field directed radially outward from the charge. To find the electric potential at a point located a distance r from the charge, let's begin with the general expression for potential difference, Equation 25.3,

$$V_B - V_A = - \int_A^B \vec{E} \cdot d\vec{s}$$

where **A** and **B** are the two arbitrary points shown in Figure 25.7. At any point in space, the electric field due to the point charge is $\vec{E} = (k_e q/r^2) \hat{r}$ (Eq. 23.9), where \hat{r} is a unit vector directed radially outward from the charge. Therefore, the quantity $\vec{E} \cdot d\vec{s}$ can be expressed as

$$\vec{E} \cdot d\vec{s} = k_e \frac{q}{r^2} \hat{r} \cdot d\vec{s}$$

Because the magnitude of \hat{r} is 1, the dot product $\hat{r} \cdot d\vec{s} = ds \cos \theta$, where θ is the angle between \hat{r} and $d\vec{s}$. Furthermore, $ds \cos \theta$ is the projection of $d\vec{s}$ onto \hat{r} ; therefore, $ds \cos \theta = dr$. That is, any displacement $d\vec{s}$ along the path from point **A** to point **B** produces a change dr in the magnitude of \vec{r} , the position vector of the point relative to the charge creating the field. Making these substitutions, we find that $\vec{E} \cdot d\vec{s} = (k_e q/r^2) dr$; hence, the expression for the potential difference becomes

$$V_B - V_A = -k_e q \int_{r_A}^{r_B} \frac{dr}{r^2} = k_e \frac{q}{r} \Big|_{r_A}^{r_B}$$

$$V_B - V_A = k_e q \left[\frac{1}{r_B} - \frac{1}{r_A} \right] \quad (25.10)$$

Equation 25.10 shows us that the integral of $\vec{E} \cdot d\vec{s}$ is *independent* of the path between points **A** and **B**. Multiplying by a charge q_0 that moves between points **A** and **B**, we see that the integral of $q_0 \vec{E} \cdot d\vec{s}$ is also independent of path. This latter integral, which is the work done by the electric force on the charge q_0 , shows that the electric force is conservative (see Section 7.7). We define a field that is related to a conservative force as a **conservative field**. Therefore, Equation 25.10 tells us that the electric field of a fixed point charge q is conservative. Furthermore, Equation 25.10 expresses the important result that the potential difference between any two points **A** and **B** in a field created by a point charge depends only on the radial coordinates r_A and r_B . It is customary to choose the reference of electric potential for a point charge to be $V = 0$ at $r_A = \infty$. With this reference choice, the electric potential due to a point charge at any distance r from the charge is

$$V = k_e \frac{q}{r} \quad (25.11)$$

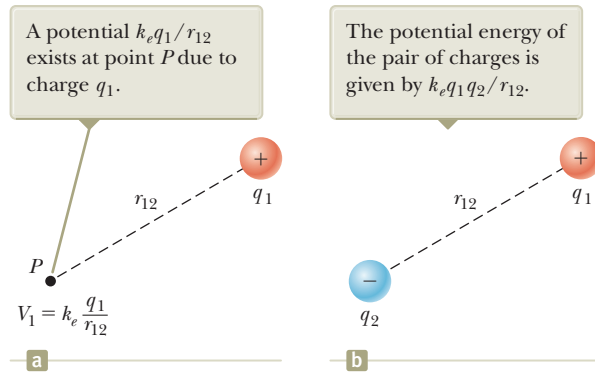


Figure 25.8 (a) Charge q_1 establishes an electric potential V_1 at point P . (b) Charge q_2 is brought from infinity to point P .

We obtain the electric potential resulting from two or more point charges by applying the superposition principle. That is, the total electric potential at some point P due to several point charges is the sum of the potentials due to the individual charges. For a group of point charges, we can write the total electric potential at P as

$$V = k_e \sum_i \frac{q_i}{r_i} \quad (25.12)$$

◀ Electric potential due to several point charges

Figure 25.8a shows a charge q_1 , which sets up an electric field throughout space. The charge also establishes an electric potential at all points, including point P , where the electric potential is V_1 . Now imagine that an external agent brings a charge q_2 from infinity to point P . The work that must be done to do this is given by Equation 25.4, $W = q_2\Delta V$. This work represents a transfer of energy across the boundary of the two-charge system, and the energy appears in the system as potential energy U when the particles are separated by a distance r_{12} as in Figure 25.8b. From Equation 8.2, we have $W = \Delta U$. Therefore, the **electric potential energy** of a pair of point charges¹ can be found as follows:

$$\begin{aligned} \Delta U = W = q_2\Delta V &\rightarrow U - 0 = q_2 \left(k_e \frac{q_1}{r_{12}} - 0 \right) \\ U &= k_e \frac{q_1 q_2}{r_{12}} \end{aligned} \quad (25.13)$$

If the charges are of the same sign, then U is positive. Positive work must be done by an external agent on the system to bring the two charges near each other (because charges of the same sign repel). If the charges are of opposite sign, as in Figure 25.8b, then U is negative. Negative work is done by an external agent against the attractive force between the charges of opposite sign as they are brought near each other; a force must be applied opposite the displacement to prevent q_2 from accelerating toward q_1 .

If the system consists of more than two charged particles, we can obtain the total potential energy of the system by calculating U for every *pair* of charges and summing the terms algebraically. For example, the total potential energy of the system of three charges shown in Figure 25.9 is

$$U = k_e \left(\frac{q_1 q_2}{r_{12}} + \frac{q_1 q_3}{r_{13}} + \frac{q_2 q_3}{r_{23}} \right) \quad (25.14)$$

Physically, this result can be interpreted as follows. Imagine q_1 is fixed at the position shown in Figure 25.9 but q_2 and q_3 are at infinity. The work an external agent must do to bring q_2 from infinity to its position near q_1 is $k_e q_1 q_2 / r_{12}$, which is the first term in Equation 25.14. The last two terms represent the work required to bring q_3 from infinity to its position near q_1 and q_2 . (The result is independent of the order in which the charges are transported.)

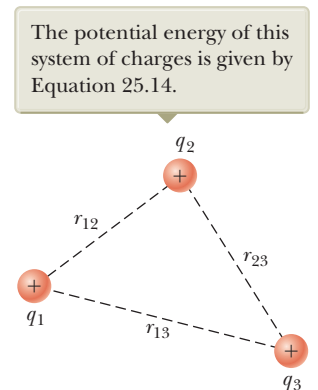


Figure 25.9 Three point charges are fixed at the positions shown.

¹The expression for the electric potential energy of a system made up of two point charges, Equation 25.13, is of the same form as the equation for the gravitational potential energy of a system made up of two point masses, $-Gm_1 m_2 / r$ (see Chapter 13). The similarity is not surprising considering that both expressions are derived from an inverse-square force law.

- Quick Quiz 25.3** In Figure 25.8b, take q_2 to be a negative source charge and q_1 to be a second charge whose sign can be changed. (i) If q_1 is initially positive and is changed to a charge of the same magnitude but negative, what happens to the potential at the position of q_1 due to q_2 ? (a) It increases. (b) It decreases. (c) It remains the same. (ii) When q_1 is changed from positive to negative, what happens to the potential energy of the two-charge system? Choose from the same possibilities.

Example 25.3 The Electric Potential Due to Two Point Charges

As shown in Figure 25.10a, a charge $q_1 = 2.00 \mu\text{C}$ is located at the origin and a charge $q_2 = -6.00 \mu\text{C}$ is located at $(0, 3.00) \text{ m}$.

(A) Find the total electric potential due to these charges at the point P , whose coordinates are $(4.00, 0) \text{ m}$.

SOLUTION

Conceptualize Recognize first that the $2.00\text{-}\mu\text{C}$ and $-6.00\text{-}\mu\text{C}$ charges are source charges and set up an electric field as well as a potential at all points in space, including point P .

Categorize The potential is evaluated using an equation developed in this chapter, so we categorize this example as a substitution problem.

Use Equation 25.12 for the system of two source charges:

$$V_P = k_e \left(\frac{q_1}{r_1} + \frac{q_2}{r_2} \right)$$

Substitute numerical values:

$$\begin{aligned} V_P &= (8.988 \times 10^9 \text{ N} \cdot \text{m}^2/\text{C}^2) \left(\frac{2.00 \times 10^{-6} \text{ C}}{4.00 \text{ m}} + \frac{-6.00 \times 10^{-6} \text{ C}}{5.00 \text{ m}} \right) \\ &= -6.29 \times 10^3 \text{ V} \end{aligned}$$

(B) Find the change in potential energy of the system of two charges plus a third charge $q_3 = 3.00 \mu\text{C}$ as the latter charge moves from infinity to point P (Fig. 25.10b).

SOLUTION

Assign $U_i = 0$ for the system to the initial configuration in which the charge q_3 is at infinity. Use Equation 25.2 to evaluate the potential energy for the configuration in which the charge is at P :

$$U_f = q_3 V_P$$

Substitute numerical values to evaluate ΔU :

$$\begin{aligned} \Delta U &= U_f - U_i = q_3 V_P - 0 = (3.00 \times 10^{-6} \text{ C})(-6.29 \times 10^3 \text{ V}) \\ &= -1.89 \times 10^{-2} \text{ J} \end{aligned}$$

Therefore, because the potential energy of the system has decreased, an external agent has to do positive work to remove the charge q_3 from point P back to infinity.

WHAT IF? You are working through this example with a classmate and she says, “Wait a minute! In part (B), we ignored the potential energy associated with the pair of charges q_1 and q_2 !” How would you respond?

Answer Given the statement of the problem, it is not necessary to include this potential energy because part (B) asks for the *change* in potential energy of the system as q_3 is brought in from infinity. Because the configuration of charges q_1 and q_2 does not change in the process, there is no ΔU associated with these charges. Had part (B) asked to find the change in potential energy when *all three* charges start out infinitely far apart and are then brought to the positions in Figure 25.10b, however, you would have to calculate the change using Equation 25.14.

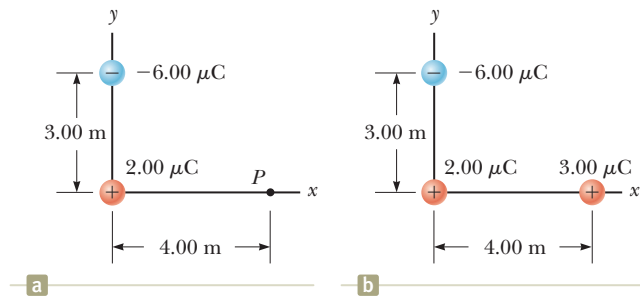


Figure 25.10 (Example 25.3) (a) The electric potential at P due to the two charges q_1 and q_2 is the algebraic sum of the potentials due to the individual charges. (b) A third charge $q_3 = 3.00 \mu\text{C}$ is brought from infinity to point P .

25.4 Obtaining the Value of the Electric Field from the Electric Potential

The electric field $\vec{\mathbf{E}}$ and the electric potential V are related as shown in Equation 25.3, which tells us how to find ΔV if the electric field $\vec{\mathbf{E}}$ is known. What if the situation is reversed? How do we calculate the value of the electric field if the electric potential is known in a certain region?

From Equation 25.3, the potential difference dV between two points a distance ds apart can be expressed as

$$dV = -\vec{\mathbf{E}} \cdot d\vec{\mathbf{s}} \quad (25.15)$$

If the electric field has only one component E_x , then $\vec{\mathbf{E}} \cdot d\vec{\mathbf{s}} = E_x dx$. Therefore, Equation 25.15 becomes $dV = -E_x dx$, or

$$E_x = -\frac{dV}{dx} \quad (25.16)$$

That is, the x component of the electric field is equal to the negative of the derivative of the electric potential with respect to x . Similar statements can be made about the y and z components. Equation 25.16 is the mathematical statement of the electric field being a measure of the rate of change with position of the electric potential as mentioned in Section 25.1.

Experimentally, electric potential and position can be measured easily with a voltmeter (a device for measuring potential difference) and a meterstick. Consequently, an electric field can be determined by measuring the electric potential at several positions in the field and making a graph of the results. According to Equation 25.16, the slope of a graph of V versus x at a given point provides the magnitude of the electric field at that point.

Imagine starting at a point and then moving through a displacement $d\vec{\mathbf{s}}$ along an equipotential surface. For this motion, $dV = 0$ because the potential is constant along an equipotential surface. From Equation 25.15, we see that $dV = -\vec{\mathbf{E}} \cdot d\vec{\mathbf{s}} = 0$; therefore, because the dot product is zero, $\vec{\mathbf{E}}$ must be perpendicular to the displacement along the equipotential surface. This result shows that the equipotential surfaces must always be perpendicular to the electric field lines passing through them.

As mentioned at the end of Section 25.2, the equipotential surfaces associated with a uniform electric field consist of a family of planes perpendicular to the field lines. Figure 25.11a shows some representative equipotential surfaces for this situation.

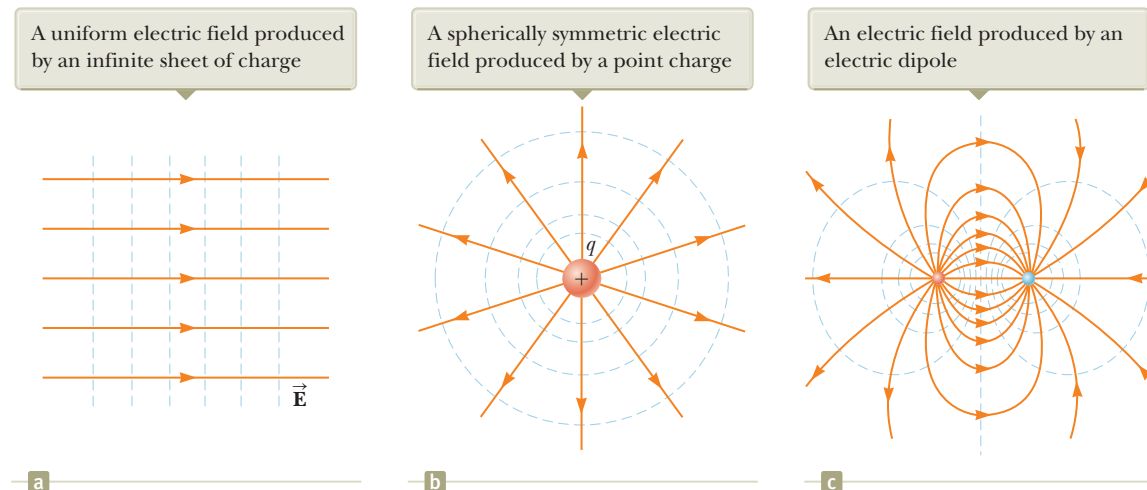


Figure 25.11 Equipotential surfaces (the dashed blue lines are intersections of these surfaces with the page) and electric field lines. In all cases, the equipotential surfaces are *perpendicular* to the electric field lines at every point.

If the charge distribution creating an electric field has spherical symmetry such that the volume charge density depends only on the radial distance r , the electric field is radial. In this case, $\vec{\mathbf{E}} \cdot d\vec{\mathbf{s}} = E_r dr$, and we can express dV as $dV = -E_r dr$. Therefore,

$$E_r = -\frac{dV}{dr} \quad (25.17)$$

For example, the electric potential of a point charge is $V = k_e q/r$. Because V is a function of r only, the potential function has spherical symmetry. Applying Equation 25.17, we find that the magnitude of the electric field due to the point charge is $E_r = k_e q/r^2$, a familiar result. Notice that the potential changes only in the radial direction, not in any direction perpendicular to r . Therefore, V (like E_r) is a function only of r , which is again consistent with the idea that equipotential surfaces are perpendicular to field lines. In this case, the equipotential surfaces are a family of spheres concentric with the spherically symmetric charge distribution (Fig. 25.11b). The equipotential surfaces for an electric dipole are sketched in Figure 25.11c.

In general, the electric potential is a function of all three spatial coordinates. If $V(r)$ is given in terms of the Cartesian coordinates, the electric field components E_x , E_y , and E_z can readily be found from $V(x, y, z)$ as the partial derivatives²

$$E_x = -\frac{\partial V}{\partial x} \quad E_y = -\frac{\partial V}{\partial y} \quad E_z = -\frac{\partial V}{\partial z} \quad (25.18)$$

Finding the electric field from the potential

Quick Quiz 25.4 In a certain region of space, the electric potential is zero everywhere along the x axis. (i) From this information, you can conclude that the x component of the electric field in this region is (a) zero, (b) in the positive x direction, or (c) in the negative x direction. (ii) Suppose the electric potential is $+2$ V everywhere along the x axis. From the same choices, what can you conclude about the x component of the electric field now?

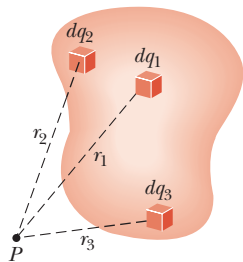


Figure 25.12 The electric potential at point P due to a continuous charge distribution can be calculated by dividing the charge distribution into elements of charge dq and summing the electric potential contributions over all elements. Three sample elements of charge are shown.

Electric potential due to a continuous charge distribution

25.5 Electric Potential Due to Continuous Charge Distributions

In Section 25.3, we found how to determine the electric potential due to a small number of charges. What if we wish to find the potential due to a continuous distribution of charge? The electric potential in this situation can be calculated using two different methods. The first method is as follows. If the charge distribution is known, we consider the potential due to a small charge element dq , treating this element as a point charge (Fig. 25.12). From Equation 25.11, the electric potential dV at some point P due to the charge element dq is

$$dV = k_e \frac{dq}{r} \quad (25.19)$$

where r is the distance from the charge element to point P . To obtain the total potential at point P , we integrate Equation 25.19 to include contributions from all elements of the charge distribution. Because each element is, in general, a different distance from point P and k_e is constant, we can express V as

$$V = k_e \int \frac{dq}{r} \quad (25.20)$$

²In vector notation, $\vec{\mathbf{E}}$ is often written in Cartesian coordinate systems as

$$\vec{\mathbf{E}} = -\nabla V = -\left(\hat{\mathbf{i}} \frac{\partial}{\partial x} + \hat{\mathbf{j}} \frac{\partial}{\partial y} + \hat{\mathbf{k}} \frac{\partial}{\partial z}\right)V$$

where ∇ is called the *gradient operator*.

In effect, we have replaced the sum in Equation 25.12 with an integral. In this expression for V , the electric potential is taken to be zero when point P is infinitely far from the charge distribution.

The second method for calculating the electric potential is used if the electric field is already known from other considerations such as Gauss's law. If the charge distribution has sufficient symmetry, we first evaluate \vec{E} using Gauss's law and then substitute the value obtained into Equation 25.3 to determine the potential difference ΔV between any two points. We then choose the electric potential V to be zero at some convenient point.

Problem-Solving Strategy Calculating Electric Potential

The following procedure is recommended for solving problems that involve the determination of an electric potential due to a charge distribution.

1. Conceptualize. Think carefully about the individual charges or the charge distribution you have in the problem and imagine what type of potential would be created. Appeal to any symmetry in the arrangement of charges to help you visualize the potential.

2. Categorize. Are you analyzing a group of individual charges or a continuous charge distribution? The answer to this question will tell you how to proceed in the *Analyze* step.

3. Analyze. When working problems involving electric potential, remember that it is a *scalar quantity*, so there are no components to consider. Therefore, when using the superposition principle to evaluate the electric potential at a point, simply take the algebraic sum of the potentials due to each charge. You must keep track of signs, however.

As with potential energy in mechanics, only *changes* in electric potential are significant; hence, the point where the potential is set at zero is arbitrary. When dealing with point charges or a finite-sized charge distribution, we usually define $V = 0$ to be at a point infinitely far from the charges. If the charge distribution itself extends to infinity, however, some other nearby point must be selected as the reference point.

(a) If you are analyzing a group of individual charges: Use the superposition principle, which states that when several point charges are present, the resultant potential at a point P in space is the *algebraic sum* of the individual potentials at P due to the individual charges (Eq. 25.12). Example 25.4 below demonstrates this procedure.

(b) If you are analyzing a continuous charge distribution: Replace the sums for evaluating the total potential at some point P from individual charges by integrals (Eq. 25.20). The total potential at P is obtained by integrating over the entire charge distribution. For many problems, it is possible in performing the integration to express dq and r in terms of a single variable. To simplify the integration, give careful consideration to the geometry involved in the problem. Examples 25.5 through 25.7 demonstrate such a procedure.

To obtain the potential from the electric field: Another method used to obtain the potential is to start with the definition of the potential difference given by Equation 25.3. If \vec{E} is known or can be obtained easily (such as from Gauss's law), the line integral of $\vec{E} \cdot d\vec{s}$ can be evaluated.

4. Finalize. Check to see if your expression for the potential is consistent with your mental representation and reflects any symmetry you noted previously. Imagine varying parameters such as the distance of the observation point from the charges or the radius of any circular objects to see if the mathematical result changes in a reasonable way.

Example 25.4 The Electric Potential Due to a Dipole

An electric dipole consists of two charges of equal magnitude and opposite sign separated by a distance $2a$ as shown in Figure 25.13. The dipole is along the x axis and is centered at the origin.

(A) Calculate the electric potential at point P on the y axis.

SOLUTION

Conceptualize Compare this situation to that in part (B) of Example 23.6. It is the same situation, but here we are seeking the electric potential rather than the electric field.

Categorize We categorize the problem as one in which we have a small number of particles rather than a continuous distribution of charge. The electric potential can be evaluated by summing the potentials due to the individual charges.

Analyze Use Equation 25.12 to find the electric potential at P due to the two charges:

$$V_P = k_e \sum_i \frac{q_i}{r_i} = k_e \left(\frac{q}{\sqrt{a^2 + y^2}} + \frac{-q}{\sqrt{a^2 + y^2}} \right) = 0$$

(B) Calculate the electric potential at point R on the positive x axis.

SOLUTION

Use Equation 25.12 to find the electric potential at R due to the two charges:

$$V_R = k_e \sum_i \frac{q_i}{r_i} = k_e \left(\frac{-q}{x-a} + \frac{q}{x+a} \right) = -\frac{2k_e qa}{x^2 - a^2}$$

(C) Calculate V and E_x at a point on the x axis far from the dipole.

SOLUTION

For point R far from the dipole such that $x \gg a$, neglect a^2 in the denominator of the answer to part (B) and write V in this limit:

$$V_R = \lim_{x \gg a} \left(-\frac{2k_e qa}{x^2 - a^2} \right) \approx -\frac{2k_e qa}{x^2} \quad (x \gg a)$$

Use Equation 25.16 and this result to calculate the x component of the electric field at a point on the x axis far from the dipole:

$$\begin{aligned} E_x &= -\frac{dV}{dx} = -\frac{d}{dx} \left(-\frac{2k_e qa}{x^2} \right) \\ &= 2k_e qa \frac{d}{dx} \left(\frac{1}{x^2} \right) = -\frac{4k_e qa}{x^3} \quad (x \gg a) \end{aligned}$$

Finalize The potentials in parts (B) and (C) are negative because points on the positive x axis are closer to the negative charge than to the positive charge. For the same reason, the x component of the electric field is negative. Notice that we have a $1/r^3$ falloff of the electric field with distance far from the dipole, similar to the behavior of the electric field on the y axis in Example 23.6.

WHAT IF? Suppose you want to find the electric field at a point P on the y axis. In part (A), the electric potential was found to be zero for all values of y . Is the electric field zero at all points on the y axis?

Answer No. That there is no change in the potential along the y axis tells us only that the y component of the electric field is zero. Look back at Figure 23.13 in Example 23.6. We showed there that the electric field of a dipole on the y axis has only an x component. We could not find the x component in the current example because we do not have an expression for the potential near the y axis as a function of x .

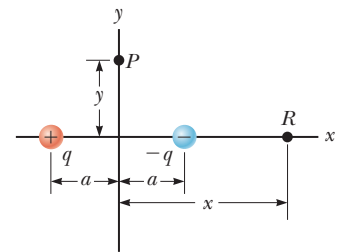


Figure 25.13 (Example 25.4) An electric dipole located on the x axis.

Example 25.5 Electric Potential Due to a Uniformly Charged Ring

(A) Find an expression for the electric potential at a point P located on the perpendicular central axis of a uniformly charged ring of radius a and total charge Q .

SOLUTION

Conceptualize Study Figure 25.14, in which the ring is oriented so that its plane is perpendicular to the x axis and its center is at the origin. Notice that the symmetry of the situation means that all the charges on the ring are the same distance from point P . Compare this example to Example 23.8. Notice that no vector considerations are necessary here because electric potential is a scalar.

Categorize Because the ring consists of a continuous distribution of charge rather than a set of discrete charges, we must use the integration technique represented by Equation 25.20 in this example.

Analyze We take point P to be at a distance x from the center of the ring as shown in Figure 25.14.

Use Equation 25.20 to express V in terms of the geometry:

$$V = k_e \int \frac{dq}{r} = k_e \int \frac{dq}{\sqrt{a^2 + x^2}}$$

Noting that a and x do not vary for an integration over the ring, bring $\sqrt{a^2 + x^2}$ in front of the integral sign and integrate over the ring:

$$V = \frac{k_e}{\sqrt{a^2 + x^2}} \int dq = \frac{k_e Q}{\sqrt{a^2 + x^2}} \quad (25.21)$$

(B) Find an expression for the magnitude of the electric field at point P .

SOLUTION

From symmetry, notice that along the x axis \vec{E} can have only an x component. Therefore, apply Equation 25.16 to Equation 25.21:

$$\begin{aligned} E_x &= -\frac{dV}{dx} = -k_e Q \frac{d}{dx} (a^2 + x^2)^{-1/2} \\ &= -k_e Q \left(-\frac{1}{2}\right) (a^2 + x^2)^{-3/2} (2x) \end{aligned}$$

$$E_x = \frac{k_e x}{(a^2 + x^2)^{3/2}} Q \quad (25.22)$$

Finalize The only variable in the expressions for V and E_x is x . That is not surprising because our calculation is valid only for points along the x axis, where y and z are both zero. This result for the electric field agrees with that obtained by direct integration (see Example 23.8). For practice, use the result of part (B) in Equation 25.3 to verify that the potential is given by the expression in part (A).

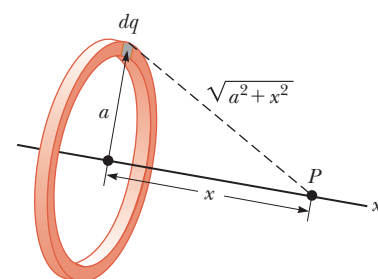


Figure 25.14 (Example 25.5) A uniformly charged ring of radius a lies in a plane perpendicular to the x axis. All elements dq of the ring are the same distance from a point P lying on the x axis.

Example 25.6 Electric Potential Due to a Uniformly Charged Disk

A uniformly charged disk has radius R and surface charge density σ .

(A) Find the electric potential at a point P along the perpendicular central axis of the disk.

SOLUTION

Conceptualize If we consider the disk to be a set of concentric rings, we can use our result from Example 25.5—which gives the potential due to a ring of radius a —and sum the contributions of all rings making up the disk. Figure

continued

25.6 continued

25.15 shows one such ring. Because point P is on the central axis of the disk, symmetry again tells us that all points in a given ring are the same distance from P .

Categorize Because the disk is continuous, we evaluate the potential due to a continuous charge distribution rather than a group of individual charges.

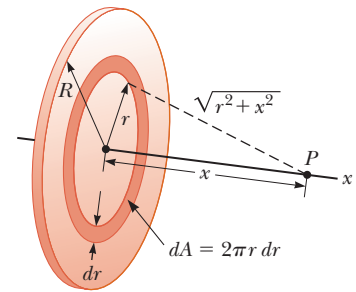
Analyze Find the amount of charge dq on a ring of radius r and width dr as shown in Figure 25.15:

Use this result in Equation 25.21 in Example 25.5 (with a replaced by the variable r and Q replaced by the differential dq) to find the potential due to the ring:

To obtain the total potential at P , integrate this expression over the limits $r = 0$ to $r = R$, noting that x is a constant:

This integral is of the common form $\int u^n du$, where $n = -\frac{1}{2}$ and $u = r^2 + x^2$, and has the value $u^{n+1}/(n+1)$. Use this result to evaluate the integral:

Figure 25.15 (Example 25.6) A uniformly charged disk of radius R lies in a plane perpendicular to the x axis. The calculation of the electric potential at any point P on the x axis is simplified by dividing the disk into many rings of radius r and width dr , with area $2\pi r dr$.



$$dq = \sigma dA = \sigma(2\pi r dr) = 2\pi\sigma r dr$$

$$dV = \frac{k_e dq}{\sqrt{r^2 + x^2}} = \frac{k_e 2\pi\sigma r dr}{\sqrt{r^2 + x^2}}$$

$$V = \pi k_e \sigma \int_0^R \frac{2r dr}{\sqrt{r^2 + x^2}} = \pi k_e \sigma \int_0^R (r^2 + x^2)^{-1/2} 2r dr$$

$$V = 2\pi k_e \sigma [(R^2 + x^2)^{1/2} - x] \quad (25.23)$$

(B) Find the x component of the electric field at a point P along the perpendicular central axis of the disk.

SOLUTION

As in Example 25.5, use Equation 25.16 to find the electric field at any axial point:

$$E_x = -\frac{dV}{dx} = 2\pi k_e \sigma \left[1 - \frac{x}{(R^2 + x^2)^{1/2}} \right] \quad (25.24)$$

Finalize Compare Equation 25.24 with the result of Example 23.9. They are the same. The calculation of V and \vec{E} for an arbitrary point off the x axis is more difficult to perform because of the absence of symmetry and we do not treat that situation in this book.

Example 25.7 Electric Potential Due to a Finite Line of Charge

A rod of length ℓ located along the x axis has a total charge Q and a uniform linear charge density λ . Find the electric potential at a point P located on the y axis a distance a from the origin (Fig. 25.16).

SOLUTION

Conceptualize The potential at P due to every segment of charge on the rod is positive because every segment carries a positive charge. Notice that we have no symmetry to appeal to here, but the simple geometry should make the problem solvable.

Categorize Because the rod is continuous, we evaluate the potential due to a continuous charge distribution rather than a group of individual charges.

Analyze In Figure 25.16, the rod lies along the x axis, dx is the length of one small segment, and dq is the charge on that segment. Because the rod has a charge per unit length λ , the charge dq on the small segment is $dq = \lambda dx$.

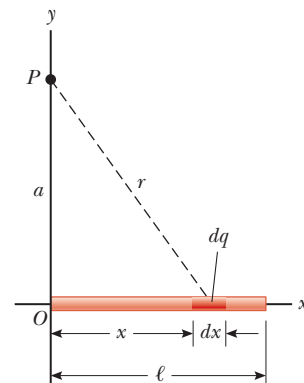


Figure 25.16 (Example 25.7) A uniform line charge of length ℓ located along the x axis. To calculate the electric potential at P , the line charge is divided into segments each of length dx and each carrying a charge $dq = \lambda dx$.

25.7 continued

Find the potential at P due to one segment of the rod at an arbitrary position x :

$$dV = k_e \frac{dq}{r} = k_e \frac{\lambda dx}{\sqrt{a^2 + x^2}}$$

Find the total potential at P by integrating this expression over the limits $x = 0$ to $x = \ell$:

$$V = \int_0^\ell k_e \frac{\lambda dx}{\sqrt{a^2 + x^2}}$$

Noting that k_e and $\lambda = Q/\ell$ are constants and can be removed from the integral, evaluate the integral with the help of Appendix B:

$$V = k_e \lambda \int_0^\ell \frac{dx}{\sqrt{a^2 + x^2}} = k_e \frac{Q}{\ell} \ln(x + \sqrt{a^2 + x^2}) \Big|_0^\ell$$

Evaluate the result between the limits: $V = k_e \frac{Q}{\ell} [\ln(\ell + \sqrt{a^2 + \ell^2}) - \ln a] = k_e \frac{Q}{\ell} \ln\left(\frac{\ell + \sqrt{a^2 + \ell^2}}{a}\right)$ (25.25)

Finalize If $\ell \ll a$, the potential at P should approach that of a point charge because the rod is very short compared to the distance from the rod to P . By using a series expansion for the natural logarithm from Appendix B.5, it is easy to show that Equation 25.25 becomes $V = k_e Q/a$.

WHAT IF? What if you were asked to find the electric field at point P ? Would that be a simple calculation?

Answer Calculating the electric field by means of Equation 23.11 would be a little messy. There is no symmetry to appeal to, and the integration over the line of charge would represent a vector addition of electric fields at point P . Using Equation 25.18, you could find E_y by replacing a with y in Equation 25.25 and performing the differentiation with respect to y . Because the charged rod in Figure

25.16 lies entirely to the right of $x = 0$, the electric field at point P would have an x component to the left if the rod is charged positively. You cannot use Equation 25.18 to find the x component of the field, however, because the potential due to the rod was evaluated at a specific value of x ($x = 0$) rather than a general value of x . You would have to find the potential as a function of both x and y to be able to find the x and y components of the electric field using Equation 25.18.

25.6 Electric Potential Due to a Charged Conductor

In Section 24.4, we found that when a solid conductor in equilibrium carries a net charge, the charge resides on the conductor's outer surface. Furthermore, the electric field just outside the conductor is perpendicular to the surface and the field inside is zero.

We now generate another property of a charged conductor, related to electric potential. Consider two points **A** and **B** on the surface of a charged conductor as shown in Figure 25.17. Along a surface path connecting these points, \vec{E} is always

Notice from the spacing of the positive signs that the surface charge density is nonuniform.

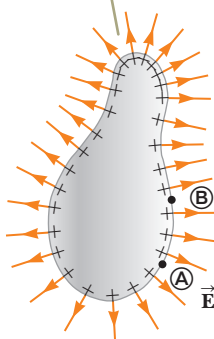


Figure 25.17 An arbitrarily shaped conductor carrying a positive charge. When the conductor is in electrostatic equilibrium, all the charge resides at the surface, $\vec{E} = 0$ inside the conductor, and the direction of \vec{E} immediately outside the conductor is perpendicular to the surface. The electric potential is constant inside the conductor and is equal to the potential at the surface.

Pitfall Prevention 25.6

Potential May Not Be Zero

The electric potential inside the conductor is not necessarily zero in Figure 25.17, even though the electric field is zero. Equation 25.15 shows that a zero value of the field results in no *change* in the potential from one point to another inside the conductor. Therefore, the potential everywhere inside the conductor, including the surface, has the same value, which may or may not be zero, depending on where the zero of potential is defined.

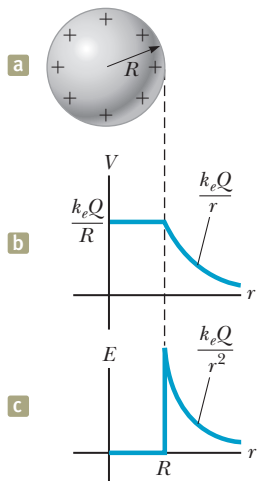


Figure 25.18 (a) The excess charge on a conducting sphere of radius R is uniformly distributed on its surface. (b) Electric potential versus distance r from the center of the charged conducting sphere. (c) Electric field magnitude versus distance r from the center of the charged conducting sphere.

perpendicular to the displacement $d\vec{s}$; therefore, $\vec{E} \cdot d\vec{s} = 0$. Using this result and Equation 25.3, we conclude that the potential difference between \textcircled{A} and \textcircled{B} is necessarily zero:

$$V_{\textcircled{B}} - V_{\textcircled{A}} = - \int_{\textcircled{A}}^{\textcircled{B}} \vec{E} \cdot d\vec{s} = 0$$

This result applies to any two points on the surface. Therefore, V is constant everywhere on the surface of a charged conductor in equilibrium. That is,

the surface of any charged conductor in electrostatic equilibrium is an equipotential surface: every point on the surface of a charged conductor in equilibrium is at the same electric potential. Furthermore, because the electric field is zero inside the conductor, the electric potential is constant everywhere inside the conductor and equal to its value at the surface.

Because of the constant value of the potential, no work is required to move a charge from the interior of a charged conductor to its surface.

Consider a solid metal conducting sphere of radius R and total positive charge Q as shown in Figure 25.18a. As determined in part (A) of Example 24.3, the electric field outside the sphere is $k_e Q/r^2$ and points radially outward. Because the field outside a spherically symmetric charge distribution is identical to that of a point charge, we expect the potential to also be that of a point charge, $k_e Q/r$. At the surface of the conducting sphere in Figure 25.18a, the potential must be $k_e Q/R$. Because the entire sphere must be at the same potential, the potential at any point within the sphere must also be $k_e Q/R$. Figure 25.18b is a plot of the electric potential as a function of r , and Figure 25.18c shows how the electric field varies with r .

When a net charge is placed on a spherical conductor, the surface charge density is uniform as indicated in Figure 25.18a. If the conductor is nonspherical as in Figure 25.17, however, the surface charge density is high where the radius of curvature is small (as noted in Section 24.4) and low where the radius of curvature is large. Because the electric field immediately outside the conductor is proportional to the surface charge density, the electric field is large near convex points having small radii of curvature and reaches very high values at sharp points. In Example 25.8, the relationship between electric field and radius of curvature is explored mathematically.

Example 25.8 Two Connected Charged Spheres

Two spherical conductors of radii r_1 and r_2 are separated by a distance much greater than the radius of either sphere. The spheres are connected by a conducting wire as shown in Figure 25.19. The charges on the spheres in equilibrium are q_1 and q_2 , respectively, and they are uniformly charged. Find the ratio of the magnitudes of the electric fields at the surfaces of the spheres.

SOLUTION

Conceptualize Imagine the spheres are much farther apart than shown in Figure 25.19. Because they are so far apart, the field of one does not affect the charge distribution on the other. The conducting wire between them ensures that both spheres have the same electric potential.

Categorize Because the spheres are so far apart, we model the charge distribution on them as spherically symmetric, and we can model the field and potential outside the spheres to be that due to point charges.

Analyze Set the electric potentials at the surfaces of the spheres equal to each other:

$$V = k_e \frac{q_1}{r_1} = k_e \frac{q_2}{r_2}$$

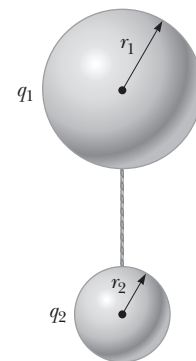


Figure 25.19 (Example 25.8) Two charged spherical conductors connected by a conducting wire. The spheres are at the same electric potential V .

► 25.8 continued

Solve for the ratio of charges on the spheres:

$$(1) \quad \frac{q_1}{q_2} = \frac{r_1}{r_2}$$

Write expressions for the magnitudes of the electric fields at the surfaces of the spheres:

$$E_1 = k_e \frac{q_1}{r_1^2} \quad \text{and} \quad E_2 = k_e \frac{q_2}{r_2^2}$$

Evaluate the ratio of these two fields:

$$\frac{E_1}{E_2} = \frac{q_1}{q_2} \frac{r_2^2}{r_1^2}$$

Substitute for the ratio of charges from Equation (1):

$$(2) \quad \frac{E_1}{E_2} = \frac{r_1}{r_2} \frac{r_2^2}{r_1^2} = \frac{r_2}{r_1}$$

Finalize The field is stronger in the vicinity of the smaller sphere even though the electric potentials at the surfaces of both spheres are the same. If $r_2 \rightarrow 0$, then $E_2 \rightarrow \infty$, verifying the statement above that the electric field is very large at sharp points.

A Cavity Within a Conductor

Suppose a conductor of arbitrary shape contains a cavity as shown in Figure 25.20. Let's assume no charges are inside the cavity. In this case, the electric field inside the cavity must be *zero* regardless of the charge distribution on the outside surface of the conductor as we mentioned in Section 24.4. Furthermore, the field in the cavity is zero even if an electric field exists outside the conductor.

To prove this point, remember that every point on the conductor is at the same electric potential; therefore, any two points \textcircled{A} and \textcircled{B} on the cavity's surface must be at the same potential. Now imagine a field \vec{E} exists in the cavity and evaluate the potential difference $V_{\textcircled{B}} - V_{\textcircled{A}}$ defined by Equation 25.3:

$$V_{\textcircled{B}} - V_{\textcircled{A}} = - \int_{\textcircled{A}}^{\textcircled{B}} \vec{E} \cdot d\vec{s}$$

Because $V_{\textcircled{B}} - V_{\textcircled{A}} = 0$, the integral of $\vec{E} \cdot d\vec{s}$ must be zero for all paths between any two points \textcircled{A} and \textcircled{B} on the conductor. The only way that can be true for *all* paths is if \vec{E} is zero *everywhere* in the cavity. Therefore, a cavity surrounded by conducting walls is a field-free region as long as no charges are inside the cavity.

Corona Discharge

A phenomenon known as **corona discharge** is often observed near a conductor such as a high-voltage power line. When the electric field in the vicinity of the conductor is sufficiently strong, electrons resulting from random ionizations of air molecules near the conductor accelerate away from their parent molecules. These rapidly moving electrons can ionize additional molecules near the conductor, creating more free electrons. The observed glow (or corona discharge) results from the recombination of these free electrons with the ionized air molecules. If a conductor has an irregular shape, the electric field can be very high near sharp points or edges of the conductor; consequently, the ionization process and corona discharge are most likely to occur around such points.

Corona discharge is used in the electrical transmission industry to locate broken or faulty components. For example, a broken insulator on a transmission tower has sharp edges where corona discharge is likely to occur. Similarly, corona discharge will occur at the sharp end of a broken conductor strand. Observation of these discharges is difficult because the visible radiation emitted is weak and most of the radiation is in the ultraviolet. (We will discuss ultraviolet radiation and other portions of the electromagnetic spectrum in Section 34.7.) Even use of traditional ultraviolet cameras is of little help because the radiation from the corona

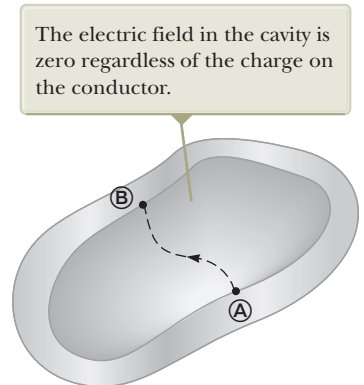
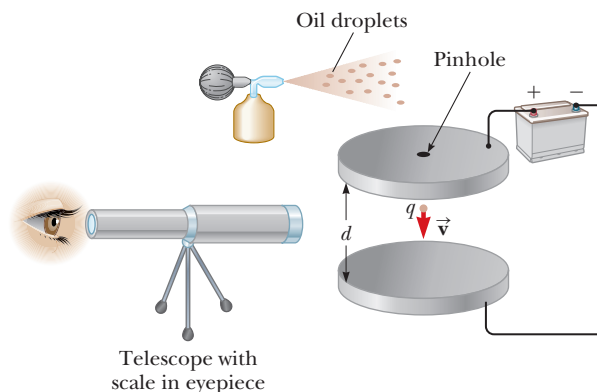


Figure 25.20 A conductor in electrostatic equilibrium containing a cavity.

Figure 25.21 Schematic drawing of the Millikan oil-drop apparatus.



discharge is overwhelmed by ultraviolet radiation from the Sun. Newly developed dual-spectrum devices combine a narrow-band ultraviolet camera with a visible-light camera to show a daylight view of the corona discharge in the actual location on the transmission tower or cable. The ultraviolet part of the camera is designed to operate in a wavelength range in which radiation from the Sun is very weak.

25.7 The Millikan Oil-Drop Experiment

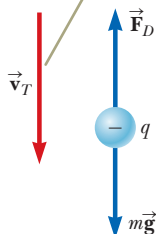
Robert Millikan performed a brilliant set of experiments from 1909 to 1913 in which he measured e , the magnitude of the elementary charge on an electron, and demonstrated the quantized nature of this charge. His apparatus, diagrammed in Figure 25.21, contains two parallel metallic plates. Oil droplets from an atomizer are allowed to pass through a small hole in the upper plate. Millikan used x-rays to ionize the air in the chamber so that freed electrons would adhere to the oil drops, giving them a negative charge. A horizontally directed light beam is used to illuminate the oil droplets, which are viewed through a telescope whose long axis is perpendicular to the light beam. When viewed in this manner, the droplets appear as shining stars against a dark background and the rate at which individual drops fall can be determined.

Let's assume a single drop having a mass m and carrying a charge q is being viewed and its charge is negative. If no electric field is present between the plates, the two forces acting on the charge are the gravitational force $m\vec{g}$ acting downward³ and a viscous drag force \vec{F}_D acting upward as indicated in Figure 25.22a. The drag force is proportional to the drop's speed as discussed in Section 6.4. When the drop reaches its terminal speed v_T the two forces balance each other ($mg = F_D$).

Now suppose a battery connected to the plates sets up an electric field between the plates such that the upper plate is at the higher electric potential. In this case, a third force $q\vec{E}$ acts on the charged drop. The particle in a field model applies twice to the particle: it is in a gravitational field and an electric field. Because q is negative and \vec{E} is directed downward, this electric force is directed upward as shown in Figure 25.22b. If this upward force is strong enough, the drop moves upward and the drag force \vec{F}'_D acts downward. When the upward electric force $q\vec{E}$ balances the sum of the gravitational force and the downward drag force \vec{F}'_D , the drop reaches a new terminal speed v'_T in the upward direction.

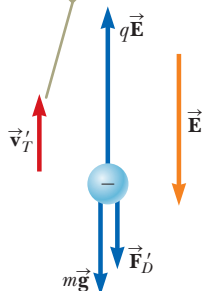
With the field turned on, a drop moves slowly upward, typically at rates of hundredths of a centimeter per second. The rate of fall in the absence of a field is comparable. Hence, one can follow a single droplet for hours, alternately rising and falling, by simply turning the electric field on and off.

With the electric field off, the droplet falls at terminal velocity \vec{v}_T under the influence of the gravitational and drag forces.



a

When the electric field is turned on, the droplet moves upward at terminal velocity \vec{v}'_T under the influence of the electric, gravitational, and drag forces.



b

Figure 25.22 The forces acting on a negatively charged oil droplet in the Millikan experiment.

³There is also a buoyant force on the oil drop due to the surrounding air. This force can be incorporated as a correction in the gravitational force $m\vec{g}$ on the drop, so we will not consider it in our analysis.

After recording measurements on thousands of droplets, Millikan and his coworkers found that all droplets, to within about 1% precision, had a charge equal to some integer multiple of the elementary charge e :

$$q = ne \quad n = 0, -1, -2, -3, \dots$$

where $e = 1.60 \times 10^{-19}$ C. Millikan's experiment yields conclusive evidence that charge is quantized. For this work, he was awarded the Nobel Prize in Physics in 1923.

25.8 Applications of Electrostatics

The practical application of electrostatics is represented by such devices as lightning rods and electrostatic precipitators and by such processes as xerography and the painting of automobiles. Scientific devices based on the principles of electrostatics include electrostatic generators, the field-ion microscope, and ion-drive rocket engines. Details of two devices are given below.

The Van de Graaff Generator

Experimental results show that when a charged conductor is placed in contact with the inside of a hollow conductor, all the charge on the charged conductor is transferred to the hollow conductor. In principle, the charge on the hollow conductor and its electric potential can be increased without limit by repetition of the process.

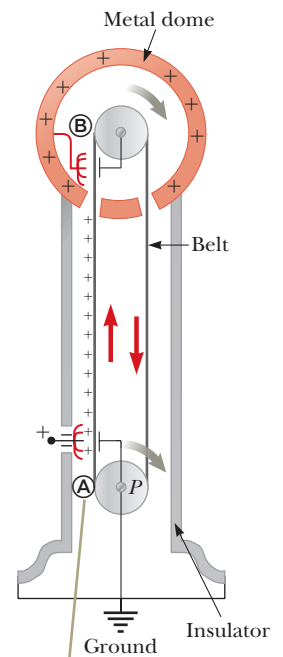
In 1929, Robert J. Van de Graaff (1901–1967) used this principle to design and build an electrostatic generator, and a schematic representation of it is given in Figure 25.23. This type of generator was once used extensively in nuclear physics research. Charge is delivered continuously to a high-potential electrode by means of a moving belt of insulating material. The high-voltage electrode is a hollow metal dome mounted on an insulating column. The belt is charged at point A by means of a corona discharge between comb-like metallic needles and a grounded grid. The needles are maintained at a positive electric potential of typically 10^4 V. The positive charge on the moving belt is transferred to the dome by a second comb of needles at point B. Because the electric field inside the dome is negligible, the positive charge on the belt is easily transferred to the conductor regardless of its potential. In practice, it is possible to increase the electric potential of the dome until electrical discharge occurs through the air. Because the “breakdown” electric field in air is about 3×10^6 V/m, a sphere 1.00 m in radius can be raised to a maximum potential of 3×10^6 V. The potential can be increased further by increasing the dome's radius and placing the entire system in a container filled with high-pressure gas.

Van de Graaff generators can produce potential differences as large as 20 million volts. Protons accelerated through such large potential differences receive enough energy to initiate nuclear reactions between themselves and various target nuclei. Smaller generators are often seen in science classrooms and museums. If a person insulated from the ground touches the sphere of a Van de Graaff generator, his or her body can be brought to a high electric potential. The person's hair acquires a net positive charge, and each strand is repelled by all the others as in the opening photograph of Chapter 23.

The Electrostatic Precipitator

One important application of electrical discharge in gases is the *electrostatic precipitator*. This device removes particulate matter from combustion gases, thereby reducing air pollution. Precipitators are especially useful in coal-burning power plants and industrial operations that generate large quantities of smoke. Current systems are able to eliminate more than 99% of the ash from smoke.

Figure 25.24a (page 766) shows a schematic diagram of an electrostatic precipitator. A high potential difference (typically 40 to 100 kV) is maintained between



The charge is deposited on the belt at point A and transferred to the hollow conductor at point B.

Figure 25.23 Schematic diagram of a Van de Graaff generator. Charge is transferred to the metal dome at the top by means of a moving belt.




Figure 25.24 (a) Schematic diagram of an electrostatic precipitator. Compare the air pollution when the electrostatic precipitator is (b) operating and (c) turned off.

a wire running down the center of a duct and the walls of the duct, which are grounded. The wire is maintained at a negative electric potential with respect to the walls, so the electric field is directed toward the wire. The values of the field near the wire become high enough to cause a corona discharge around the wire; the air near the wire contains positive ions, electrons, and such negative ions as O_2^- . The air to be cleaned enters the duct and moves near the wire. As the electrons and negative ions created by the discharge are accelerated toward the outer wall by the electric field, the dirt particles in the air become charged by collisions and ion capture. Because most of the charged dirt particles are negative, they too are drawn to the duct walls by the electric field. When the duct is periodically shaken, the particles break loose and are collected at the bottom.

In addition to reducing the level of particulate matter in the atmosphere (compare Figs. 25.24b and c), the electrostatic precipitator recovers valuable materials in the form of metal oxides.

Summary

Definitions

The **potential difference** ΔV between points $\textcircled{\text{A}}$ and $\textcircled{\text{B}}$ in an electric field $\vec{\mathbf{E}}$ is defined as

$$\Delta V \equiv \frac{\Delta U}{q} = -\int_{\textcircled{\text{A}}}^{\textcircled{\text{B}}} \vec{\mathbf{E}} \cdot d\vec{\mathbf{s}} \quad (25.3)$$

where ΔU is given by Equation 25.1 on page 767. The **electric potential** $V = U/q$ is a scalar quantity and has the units of joules per coulomb, where $1 \text{ J/C} \equiv 1 \text{ V}$.

An **equipotential surface** is one on which all points are at the same electric potential. Equipotential surfaces are perpendicular to electric field lines.

Concepts and Principles

When a positive charge q is moved between points \textcircled{A} and \textcircled{B} in an electric field \vec{E} , the change in the potential energy of the charge-field system is

$$\Delta U = -q \int_{\textcircled{A}}^{\textcircled{B}} \vec{E} \cdot d\vec{s} \quad (25.1)$$

If we define $V = 0$ at $r = \infty$, the electric potential due to a point charge at any distance r from the charge is

$$V = k_e \frac{q}{r} \quad (25.11)$$

The electric potential associated with a group of point charges is obtained by summing the potentials due to the individual charges.

If the electric potential is known as a function of coordinates x , y , and z , we can obtain the components of the electric field by taking the negative derivative of the electric potential with respect to the coordinates. For example, the x component of the electric field is

$$E_x = -\frac{dV}{dx} \quad (25.16)$$

The potential difference between two points separated by a distance d in a uniform electric field \vec{E} is

$$\Delta V = -Ed \quad (25.6)$$

if the direction of travel between the points is in the same direction as the electric field.

The **electric potential energy** associated with a pair of point charges separated by a distance r_{12} is

$$U = k_e \frac{q_1 q_2}{r_{12}} \quad (25.13)$$

We obtain the potential energy of a distribution of point charges by summing terms like Equation 25.13 over all pairs of particles.

The electric potential due to a continuous charge distribution is

$$V = k_e \int \frac{dq}{r} \quad (25.20)$$

Every point on the surface of a charged conductor in electrostatic equilibrium is at the same electric potential. The potential is constant everywhere inside the conductor and equal to its value at the surface.

Objective Questions

1. denotes answer available in *Student Solutions Manual/Study Guide*

- In a certain region of space, the electric field is zero. From this fact, what can you conclude about the electric potential in this region? (a) It is zero. (b) It does not vary with position. (c) It is positive. (d) It is negative. (e) None of those answers is necessarily true.
- Consider the equipotential surfaces shown in Figure 25.4. In this region of space, what is the approximate direction of the electric field? (a) It is out of the page. (b) It is into the page. (c) It is toward the top of the page. (d) It is toward the bottom of the page. (e) The field is zero.
- (i) A metallic sphere A of radius 1.00 cm is several centimeters away from a metallic spherical shell B of radius 2.00 cm. Charge 450 nC is placed on A, with no charge on B or anywhere nearby. Next, the two objects are joined by a long, thin, metallic wire (as shown in Fig. 25.19), and finally the wire is removed. How is the charge shared between A and B? (a) 0 on A, 450 nC on B (b) 90.0 nC on A and 360 nC on B, with equal surface charge densities (c) 150 nC on A and 300 nC on B (d) 225 nC on A and 225 nC on B (e) 450 nC on A and 0 on B (ii) A metallic sphere A of radius 1 cm with charge 450 nC hangs on an insulating thread inside an uncharged thin metallic spherical shell B of radius 2 cm. Next, A is made temporarily to touch the inner surface of B. How is the charge then shared between

them? Choose from the same possibilities. Arnold Arons, the only physics teacher yet to have his picture on the cover of *Time* magazine, suggested the idea for this question.

- The electric potential at $x = 3.00$ m is 120 V, and the electric potential at $x = 5.00$ m is 190 V. What is the x component of the electric field in this region, assuming the field is uniform? (a) 140 N/C (b) -140 N/C (c) 35.0 N/C (d) -35.0 N/C (e) 75.0 N/C
- Rank the potential energies of the four systems of particles shown in Figure OQ25.5 from largest to smallest. Include equalities if appropriate.

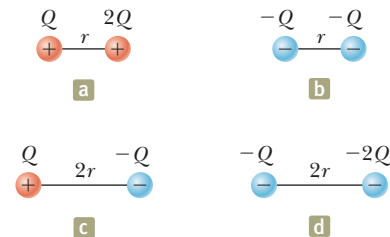


Figure OQ25.5

- In a certain region of space, a uniform electric field is in the x direction. A particle with negative charge is carried from $x = 20.0$ cm to $x = 60.0$ cm. (i) Does

the electric potential energy of the charge–field system (a) increase, (b) remain constant, (c) decrease, or (d) change unpredictably? (ii) Has the particle moved to a position where the electric potential is (a) higher than before, (b) unchanged, (c) lower than before, or (d) unpredictable?

7. Rank the electric potentials at the four points shown in Figure OQ25.7 from largest to smallest.

8. An electron in an x-ray machine is accelerated through a potential difference of 1.00×10^4 V before it hits the target. What is the kinetic energy of the electron in electron volts? (a) 1.00×10^4 eV (b) 1.60×10^{-15} eV (c) 1.60×10^{-22} eV (d) 6.25×10^{22} eV (e) 1.60×10^{-19} eV

9. Rank the electric potential energies of the systems of charges shown in Figure OQ25.9 from largest to smallest. Indicate equalities if appropriate.

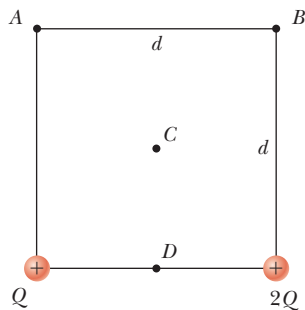


Figure OQ25.7

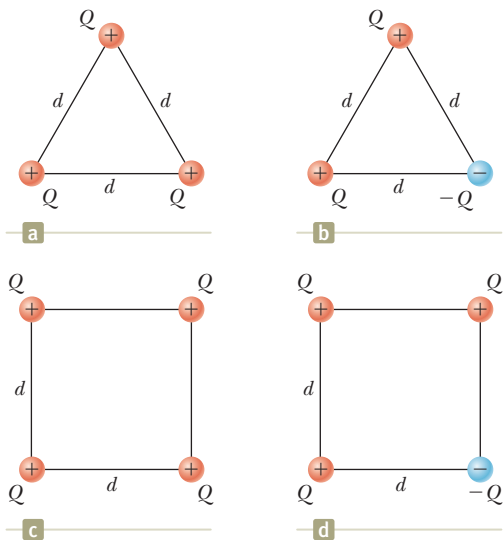


Figure OQ25.9

10. Four particles are positioned on the rim of a circle. The charges on the particles are $+0.500 \mu\text{C}$, $+1.50 \mu\text{C}$, $-1.00 \mu\text{C}$, and $-0.500 \mu\text{C}$. If the electric potential at the center of the circle due to the $+0.500 \mu\text{C}$ charge alone is 4.50×10^4 V, what is the total electric potential

at the center due to the four charges? (a) 18.0×10^4 V (b) 4.50×10^4 V (c) 0 (d) -4.50×10^4 V (e) 9.00×10^4 V

11. A proton is released from rest at the origin in a uniform electric field in the positive x direction with magnitude 850 N/C. What is the change in the electric potential energy of the proton–field system when the proton travels to $x = 2.50$ m? (a) 3.40×10^{-16} J (b) -3.40×10^{-16} J (c) 2.50×10^{-16} J (d) -2.50×10^{-16} J (e) -1.60×10^{-19} J

12. A particle with charge -40.0 nC is on the x axis at the point with coordinate $x = 0$. A second particle, with charge -20.0 nC, is on the x axis at $x = 0.500$ m. (i) Is the point at a finite distance where the electric field is zero (a) to the left of $x = 0$, (b) between $x = 0$ and $x = 0.500$ m, or (c) to the right of $x = 0.500$ m? (ii) Is the electric potential zero at this point? (a) No; it is positive. (b) Yes. (c) No; it is negative. (iii) Is there a point at a finite distance where the electric potential is zero? (a) Yes; it is to the left of $x = 0$. (b) Yes; it is between $x = 0$ and $x = 0.500$ m. (c) Yes; it is to the right of $x = 0.500$ m. (d) No.

13. A filament running along the x axis from the origin to $x = 80.0$ cm carries electric charge with uniform density. At the point P with coordinates ($x = 80.0$ cm, $y = 80.0$ cm), this filament creates electric potential 100 V. Now we add another filament along the y axis, running from the origin to $y = 80.0$ cm, carrying the same amount of charge with the same uniform density. At the same point P , is the electric potential created by the pair of filaments (a) greater than 200 V, (b) 200 V, (c) 100 V, (d) between 0 and 200 V, or (e) 0 ?

14. In different experimental trials, an electron, a proton, or a doubly charged oxygen atom (O^{2-}), is fired within a vacuum tube. The particle's trajectory carries it through a point where the electric potential is 40.0 V and then through a point at a different potential. Rank each of the following cases according to the change in kinetic energy of the particle over this part of its flight from the largest increase to the largest decrease in kinetic energy. In your ranking, display any cases of equality. (a) An electron moves from 40.0 V to 60.0 V. (b) An electron moves from 40.0 V to 20.0 V. (c) A proton moves from 40.0 V to 20.0 V. (d) A proton moves from 40.0 V to 10.0 V. (e) An O^{2-} ion moves from 40.0 V to 60.0 V.

15. A helium nucleus (charge $= 2e$, mass $= 6.63 \times 10^{-27}$ kg) traveling at 6.20×10^5 m/s enters an electric field, traveling from point A , at a potential of 1.50×10^3 V, to point B , at 4.00×10^3 V. What is its speed at point B ? (a) 7.91×10^5 m/s (b) 3.78×10^5 m/s (c) 2.13×10^5 m/s (d) 2.52×10^6 m/s (e) 3.01×10^8 m/s

Conceptual Questions

1. denotes answer available in *Student Solutions Manual/Study Guide*

1. What determines the maximum electric potential to which the dome of a Van de Graaff generator can be raised?
2. Describe the motion of a proton (a) after it is released from rest in a uniform electric field. Describe the

changes (if any) in (b) its kinetic energy and (c) the electric potential energy of the proton–field system.

3. When charged particles are separated by an infinite distance, the electric potential energy of the pair is zero. When the particles are brought close, the elec-

tric potential energy of a pair with the same sign is positive, whereas the electric potential energy of a pair with opposite signs is negative. Give a physical explanation of this statement.

4. Study Figure 23.3 and the accompanying text discussion of charging by induction. When the grounding wire is touched to the rightmost point on the sphere in Figure 23.3c, electrons are drained away from the sphere to leave the sphere positively charged. Suppose the

grounding wire is touched to the leftmost point on the sphere instead. (a) Will electrons still drain away, moving closer to the negatively charged rod as they do so? (b) What kind of charge, if any, remains on the sphere?

5. Distinguish between electric potential and electric potential energy.
6. Describe the equipotential surfaces for (a) an infinite line of charge and (b) a uniformly charged sphere.

Problems



The problems found in this chapter may be assigned online in Enhanced WebAssign

1. straightforward; 2. intermediate;
3. challenging

1. full solution available in the *Student Solutions Manual/Study Guide*

AMT Analysis Model tutorial available in Enhanced WebAssign

GP Guided Problem

M Master It tutorial available in Enhanced WebAssign

W Watch It video solution available in Enhanced WebAssign

Section 25.1 Electric Potential and Potential Difference

Section 25.2 Potential Difference in a Uniform Electric Field

1. Oppositely charged parallel plates are separated by 5.33 mm. A potential difference of 600 V exists between the plates. (a) What is the magnitude of the electric field between the plates? (b) What is the magnitude of the force on an electron between the plates? (c) How much work must be done on the electron to move it to the negative plate if it is initially positioned 2.90 mm from the positive plate?

2. A uniform electric field of magnitude 250 V/m is directed in the positive x direction. A $+12.0\text{-}\mu\text{C}$ charge moves from the origin to the point $(x, y) = (20.0\text{ cm}, 50.0\text{ cm})$. (a) What is the change in the potential energy of the charge-field system? (b) Through what potential difference does the charge move?

3. (a) Calculate the speed of a proton that is accelerated from rest through an electric potential difference of 120 V. (b) Calculate the speed of an electron that is accelerated through the same electric potential difference.

4. How much work is done (by a battery, generator, or some other source of potential difference) in moving Avogadro's number of electrons from an initial point where the electric potential is 9.00 V to a point where the electric potential is -5.00 V ? (The potential in each case is measured relative to a common reference point.)

5. A uniform electric field of magnitude 325 V/m is directed in the negative y direction in Figure P25.5. The coordinates of point

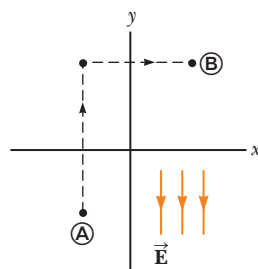


Figure P25.5

(A) are $(-0.200, -0.300)\text{ m}$, and those of point (B) are $(0.400, 0.500)\text{ m}$. Calculate the electric potential difference $V_B - V_A$ using the dashed-line path.

6. Starting with the definition of work, prove that at every point on an equipotential surface, the surface must be perpendicular to the electric field there.

7. An electron moving parallel to the x axis has an initial speed of $3.70 \times 10^6\text{ m/s}$ at the origin. Its speed is reduced to $1.40 \times 10^5\text{ m/s}$ at the point $x = 2.00\text{ cm}$. (a) Calculate the electric potential difference between the origin and that point. (b) Which point is at the higher potential?

8. (a) Find the electric potential difference ΔV_e required to stop an electron (called a "stopping potential") moving with an initial speed of $2.85 \times 10^7\text{ m/s}$. (b) Would a proton traveling at the same speed require a greater or lesser magnitude of electric potential difference? Explain. (c) Find a symbolic expression for the ratio of the proton stopping potential and the electron stopping potential, $\Delta V_p / \Delta V_e$.

9. A particle having charge $q = +2.00\text{ }\mu\text{C}$ and mass $m = 0.0100\text{ kg}$ is connected to a string that is $L = 1.50\text{ m}$ long and tied to the pivot point P in Figure P25.9. The particle, string, and pivot point all lie on a frictionless,

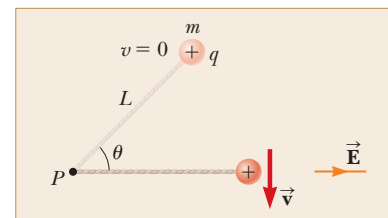


Figure P25.9

horizontal table. The particle is released from rest when the string makes an angle $\theta = 60.0^\circ$ with a uniform electric field of magnitude $E = 300 \text{ V/m}$. Determine the speed of the particle when the string is parallel to the electric field.

- 10. Review.** A block having mass m and charge $+Q$ is connected to an insulating spring having a force constant k . The block lies on a frictionless, insulating, horizontal track, and the system is immersed in a

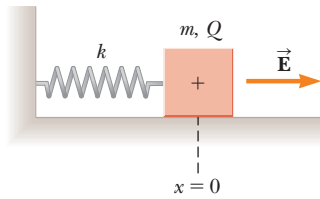


Figure P25.10

uniform electric field of magnitude E directed as shown in Figure P25.10. The block is released from rest when the spring is unstretched (at $x = 0$). We wish to show that the ensuing motion of the block is simple harmonic. (a) Consider the system of the block, the spring, and the electric field. Is this system isolated or nonisolated? (b) What kinds of potential energy exist within this system? (c) Call the initial configuration of the system that existing just as the block is released from rest. The final configuration is when the block momentarily comes to rest again. What is the value of x when the block comes to rest momentarily? (d) At some value of x we will call $x = x_0$, the block has zero net force on it. What analysis model describes the particle in this situation? (e) What is the value of x_0 ? (f) Define a new coordinate system x' such that $x' = x - x_0$. Show that x' satisfies a differential equation for simple harmonic motion. (g) Find the period of the simple harmonic motion. (h) How does the period depend on the electric field magnitude?

- 11.** An insulating rod having linear charge density $\lambda = 40.0 \mu\text{C/m}$ and linear mass density $\mu = 0.100 \text{ kg/m}$ is released from rest in a uniform electric field $E = 100 \text{ V/m}$ directed perpendicular to the rod (Fig. P25.11). (a) Determine the speed of the rod after it has traveled 2.00 m.

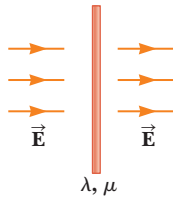


Figure P25.11

(b) **What If?** How does your answer to part (a) change if the electric field is not perpendicular to the rod? Explain.

Section 25.3 Electric Potential and Potential Energy Due to Point Charges

Note: Unless stated otherwise, assume the reference level of potential is $V = 0$ at $r = \infty$.

- 12.** (a) Calculate the electric potential 0.250 cm from an electron. (b) What is the electric potential difference between two points that are 0.250 cm and 0.750 cm from an electron? (c) How would the answers change if the electron were replaced with a proton?
- 13.** Two point charges are on the y axis. A $4.50\text{-}\mu\text{C}$ charge is located at $y = 1.25 \text{ cm}$, and a $-2.24\text{-}\mu\text{C}$ charge is located at $y = -1.80 \text{ cm}$. Find the total electric potential at (a) the origin and (b) the point whose coordinates are $(1.50 \text{ cm}, 0)$.

- 14.** The two charges in Figure P25.14 are separated by $d = 2.00 \text{ cm}$. Find the electric potential at (a) point A and (b) point B, which is halfway between the charges.

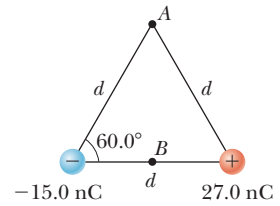


Figure P25.14

- 15.** Three positive charges are located at the corners of an equilateral triangle as in Figure P25.15. Find an expression for the electric potential at the center of the triangle.

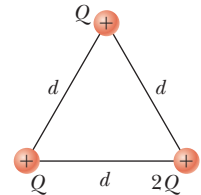


Figure P25.15

- 16.** Two point charges $Q_1 = +5.00 \text{ nC}$ and $Q_2 = -3.00 \text{ nC}$ are separated by 35.0 cm. (a) What is the electric potential at a point midway between the charges? (b) What is the potential energy of the pair of charges? What is the significance of the algebraic sign of your answer?

- 17.** Two particles, with charges of 20.0 nC and -20.0 nC , are placed at the points with coordinates $(0, 4.00 \text{ cm})$ and $(0, -4.00 \text{ cm})$ as shown in Figure P25.17. A particle with charge 10.0 nC is located at the origin.

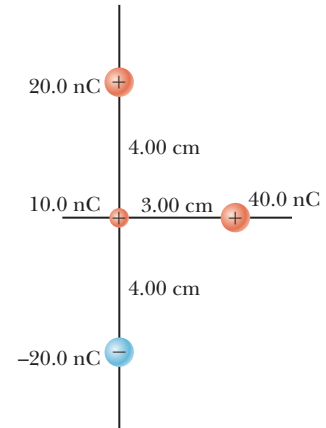


Figure P25.17

(a) Find the electric potential energy of the configuration of the three fixed charges. (b) A fourth particle, with a mass of $2.00 \times 10^{-13} \text{ kg}$ and a charge of 40.0 nC, is released from rest at the point $(3.00 \text{ cm}, 0)$. Find its speed after it has moved freely to a very large distance away.

- 18.** The two charges in Figure P25.18 are separated by a distance $d = 2.00 \text{ cm}$, and $Q = +5.00 \text{ nC}$. Find (a) the electric potential at A, (b) the electric potential at B, and (c) the electric potential difference between B and A.

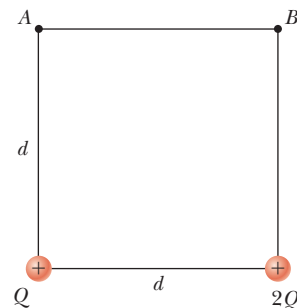


Figure P25.18

- 19.** Given two particles with $2.00\text{-}\mu\text{C}$ charges as shown in Figure P25.19 and a particle with charge $q = 1.28 \times 10^{-18} \text{ C}$ at the origin, (a) what is the net force exerted

by the two $2.00\text{-}\mu\text{C}$ charges on the charge q ? (b) What is the electric field at the origin due to the two $2.00\text{-}\mu\text{C}$ particles? (c) What is the electric potential at the origin due to the two $2.00\text{-}\mu\text{C}$ particles?

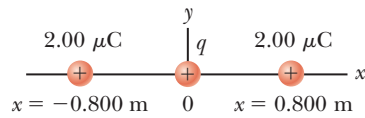


Figure P25.19

- 20.** **M** At a certain distance from a charged particle, the magnitude of the electric field is 500 V/m and the electric potential is -3.00 kV . (a) What is the distance to the particle? (b) What is the magnitude of the charge?
- 21.** Four point charges each having charge Q are located at the corners of a square having sides of length a . Find expressions for (a) the total electric potential at the center of the square due to the four charges and (b) the work required to bring a fifth charge q from infinity to the center of the square.
- 22.** **M** The three charged particles in Figure P25.22 are at the vertices of an isosceles triangle (where $d = 2.00\text{ cm}$). Taking $q = 7.00\text{ }\mu\text{C}$, calculate the electric potential at point A , the midpoint of the base.
- 23.** A particle with charge $+q$ is at the origin. A particle with charge $-2q$ is at $x = 2.00\text{ m}$ on the x axis. (a) For what finite value(s) of x is the electric field zero? (b) For what finite value(s) of x is the electric potential zero?

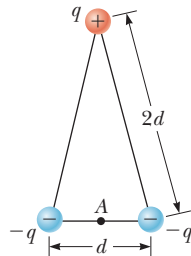


Figure P25.22

- 24.** Show that the amount of work required to assemble four identical charged particles of magnitude Q at the corners of a square of side s is $5.41k_eQ^2/s$.
- 25.** Two particles each with charge $+2.00\text{ }\mu\text{C}$ are located on the x axis. One is at $x = 1.00\text{ m}$, and the other is at $x = -1.00\text{ m}$. (a) Determine the electric potential on the y axis at $y = 0.500\text{ m}$. (b) Calculate the change in electric potential energy of the system as a third charged particle of $-3.00\text{ }\mu\text{C}$ is brought from infinitely far away to a position on the y axis at $y = 0.500\text{ m}$.
- 26.** Two charged particles of equal magnitude are located along the y axis equal distances above and below the x axis as shown in Figure P25.26. (a) Plot a graph of the electric potential at points along the x axis over the interval $-3a < x < 3a$. You should plot the potential in units of k_eQ/a . (b) Let the charge of the particle located at $y = -a$ be negative. Plot the potential along the y axis over the interval $-4a < y < 4a$.

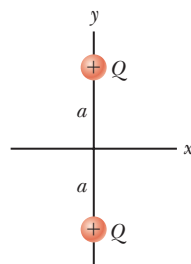


Figure P25.26

- 27.** **W** Four identical charged particles ($q = +10.0\text{ }\mu\text{C}$) are located on the corners of a rectangle as shown in Figure P25.27. The dimensions of the rectangle are $L = 60.0\text{ cm}$ and $W = 15.0\text{ cm}$. Calculate the change in

electric potential energy of the system as the particle at the lower left corner in Figure P25.27 is brought to this position from infinitely far away. Assume the other three particles in Figure P25.27 remain fixed in position.

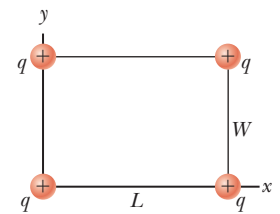


Figure P25.27

- 28.** Three particles with equal positive charges q are at the corners of an equilateral triangle of side a as shown in Figure P25.28. (a) At what point, if any, in the plane of the particles is the electric potential zero? (b) What is the electric potential at the position of one of the particles due to the other two particles in the triangle?
- 29.** Five particles with equal negative charges $-q$ are placed symmetrically around a circle of radius R . Calculate the electric potential at the center of the circle.
- 30.** **Review.** A light, unstressed spring has length d . Two identical particles, each with charge q , are connected to the opposite ends of the spring. The particles are held stationary a distance d apart and then released at the same moment. The system then oscillates on a frictionless, horizontal table. The spring has a bit of internal kinetic friction, so the oscillation is damped. The particles eventually stop vibrating when the distance between them is $3d$. Assume the system of the spring and two charged particles is isolated. Find the increase in internal energy that appears in the spring during the oscillations.
- 31.** **Review.** Two insulating spheres have radii 0.300 cm and 0.500 cm , masses 0.100 kg and 0.700 kg , and uniformly distributed charges $-2.00\text{ }\mu\text{C}$ and $3.00\text{ }\mu\text{C}$. They are released from rest when their centers are separated by 1.00 m . (a) How fast will each be moving when they collide? (b) **What If?** If the spheres were conductors, would the speeds be greater or less than those calculated in part (a)? Explain.
- 32.** **Review.** Two insulating spheres have radii r_1 and r_2 , masses m_1 and m_2 , and uniformly distributed charges $-q_1$ and q_2 . They are released from rest when their centers are separated by a distance d . (a) How fast is each moving when they collide? (b) **What If?** If the spheres were conductors, would their speeds be greater or less than those calculated in part (a)? Explain.
- 33.** How much work is required to assemble eight identical charged particles, each of magnitude q , at the corners of a cube of side s ?
- 34.** Four identical particles, each having charge q and mass m , are released from rest at the vertices of a square of side L . How fast is each particle moving when their distance from the center of the square doubles?
- 35.** **AMT** In 1911, Ernest Rutherford and his assistants Geiger and Marsden conducted an experiment in which they

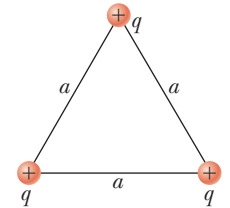


Figure P25.28

scattered alpha particles (nuclei of helium atoms) from thin sheets of gold. An alpha particle, having charge $+2e$ and mass 6.64×10^{-27} kg, is a product of certain radioactive decays. The results of the experiment led Rutherford to the idea that most of an atom's mass is in a very small nucleus, with electrons in orbit around it. (This is the planetary model of the atom, which we'll study in Chapter 42.) Assume an alpha particle, initially very far from a stationary gold nucleus, is fired with a velocity of 2.00×10^7 m/s directly toward the nucleus (charge $+79e$). What is the smallest distance between the alpha particle and the nucleus before the alpha particle reverses direction? Assume the gold nucleus remains stationary.

Section 25.4 Obtaining the Value of the Electric Field from the Electric Potential

36. Figure P25.36 represents a graph of the electric potential in a region of space versus position x , where the electric field is parallel to the x axis. Draw a graph of the x component of the electric field versus x in this region.

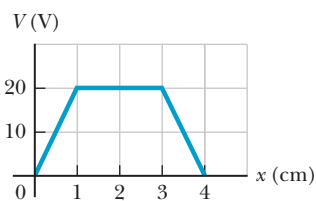


Figure P25.36

37. The potential in a region between $x = 0$ and $x = 6.00$ m is $V = a + bx$, where $a = 10.0$ V and $b = -7.00$ V/m. Determine (a) the potential at $x = 0$, 3.00 m, and 6.00 m and (b) the magnitude and direction of the electric field at $x = 0$, 3.00 m, and 6.00 m.

38. An electric field in a region of space is parallel to the x axis. The electric potential varies with position as shown in Figure P25.38. Graph the x component of the electric field versus position in this region of space.

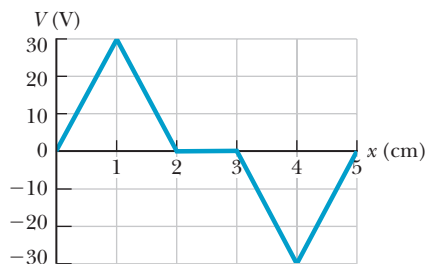
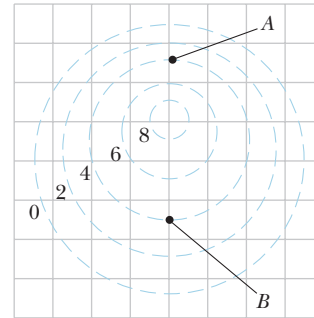


Figure P25.38

39. Over a certain region of space, the electric potential is $V = 5x - 3x^2y + 2yz^2$. (a) Find the expressions for the x , y , and z components of the electric field over this region. (b) What is the magnitude of the field at the point P that has coordinates $(1.00, 0, -2.00)$ m?

40. Figure P25.40 shows several equipotential lines, each labeled by its potential in volts. The distance between the lines of the square grid represents 1.00 cm. (a) Is the magnitude of the field larger at A or at B ? Explain how you can tell. (b) Explain what you can determine



Numerical values are in volts.

Figure P25.40

about \vec{E} at B . (c) Represent what the electric field looks like by drawing at least eight field lines.

41. The electric potential inside a charged spherical conductor of radius R is given by $V = k_e Q/R$, and the potential outside is given by $V = k_e Q/r$. Using $E_r = -dV/dr$, derive the electric field (a) inside and (b) outside this charge distribution.

42. It is shown in Example 25.7 that the potential at a point P a distance a above one end of a uniformly charged rod of length ℓ lying along the x axis is

$$V = k_e \frac{Q}{\ell} \ln \left(\frac{\ell + \sqrt{a^2 + \ell^2}}{a} \right)$$

Use this result to derive an expression for the y component of the electric field at P .

Section 25.5 Electric Potential Due to Continuous Charge Distributions

43. Consider a ring of radius R with the total charge Q spread uniformly over its perimeter. What is the potential difference between the point at the center of the ring and a point on its axis a distance $2R$ from the center?

44. A uniformly charged insulating rod of length 14.0 cm is bent into the shape of a semicircle as shown in Figure P25.44. The rod has a total charge of $-7.50 \mu\text{C}$. Find the electric potential at O , the center of the semicircle.




Figure P25.44

45. A rod of length L (Fig. P25.45) lies along the x axis with its left end at the origin. It has a nonuniform charge

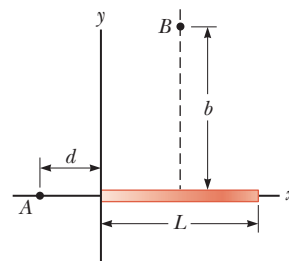


Figure P25.45 Problems 45 and 46.

density $\lambda = \alpha x$, where α is a positive constant. (a) What are the units of α ? (b) Calculate the electric potential at A .

46. For the arrangement described in Problem 45, calculate the electric potential at point B , which lies on the perpendicular bisector of the rod a distance b above the x axis.
47. A wire having a uniform linear charge density λ is bent into the shape shown in Figure P25.47. Find the electric potential at point O .

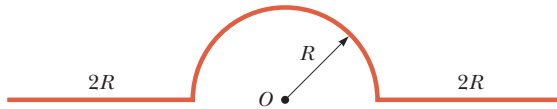


Figure P25.47

Section 25.6 Electric Potential Due to a Charged Conductor

48. The electric field magnitude on the surface of an irregularly shaped conductor varies from 56.0 kN/C to 28.0 kN/C . Can you evaluate the electric potential on the conductor? If so, find its value. If not, explain why not.
49. How many electrons should be removed from an initially uncharged spherical conductor of radius 0.300 m to produce a potential of 7.50 kV at the surface?
50. A spherical conductor has a radius of 14.0 cm and a charge of $26.0 \mu\text{C}$. Calculate the electric field and the electric potential at (a) $r = 10.0 \text{ cm}$, (b) $r = 20.0 \text{ cm}$, and (c) $r = 14.0 \text{ cm}$ from the center.
51. Electric charge can accumulate on an airplane in flight. You may have observed needle-shaped metal extensions on the wing tips and tail of an airplane. Their purpose is to allow charge to leak off before much of it accumulates. The electric field around the needle is much larger than the field around the body of the airplane and can become large enough to produce dielectric breakdown of the air, discharging the airplane. To model this process, assume two charged spherical conductors are connected by a long conducting wire and a $1.20\text{-}\mu\text{C}$ charge is placed on the combination. One sphere, representing the body of the airplane, has a radius of 6.00 cm ; the other, representing the tip of the needle, has a radius of 2.00 cm . (a) What is the electric potential of each sphere? (b) What is the electric field at the surface of each sphere?

Section 25.8 Applications of Electrostatics

52. Lightning can be studied with a Van de Graaff generator, which consists of a spherical dome on which charge is continuously deposited by a moving belt. Charge can be added until the electric field at the surface of the dome becomes equal to the

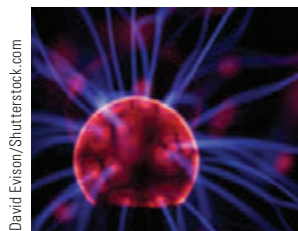


Figure P25.52

dielectric strength of air. Any more charge leaks off in sparks as shown in Figure P25.52. Assume the dome has a diameter of 30.0 cm and is surrounded by dry air with a “breakdown” electric field of $3.00 \times 10^6 \text{ V/m}$. (a) What is the maximum potential of the dome? (b) What is the maximum charge on the dome?

Additional Problems

53. *Why is the following situation impossible?* In the Bohr model of the hydrogen atom, an electron moves in a circular orbit about a proton. The model states that the electron can exist only in certain allowed orbits around the proton: those whose radius r satisfies $r = n^2(0.0529 \text{ nm})$, where $n = 1, 2, 3, \dots$. For one of the possible allowed states of the atom, the electric potential energy of the system is -13.6 eV .
54. **Review.** In fair weather, the electric field in the air at a particular location immediately above the Earth’s surface is 120 N/C directed downward. (a) What is the surface charge density on the ground? Is it positive or negative? (b) Imagine the surface charge density is uniform over the planet. What then is the charge of the whole surface of the Earth? (c) What is the Earth’s electric potential due to this charge? (d) What is the difference in potential between the head and the feet of a person 1.75 m tall? (Ignore any charges in the atmosphere.) (e) Imagine the Moon, with 27.3% of the radius of the Earth, had a charge 27.3% as large, with the same sign. Find the electric force the Earth would then exert on the Moon. (f) State how the answer to part (e) compares with the gravitational force the Earth exerts on the Moon.
55. **Review.** From a large distance away, a particle of mass 2.00 g and charge $15.0 \mu\text{C}$ is fired at $21.0 \hat{i} \text{ m/s}$ straight toward a second particle, originally stationary but free to move, with mass 5.00 g and charge $8.50 \mu\text{C}$. Both particles are constrained to move only along the x axis. (a) At the instant of closest approach, both particles will be moving at the same velocity. Find this velocity. (b) Find the distance of closest approach. After the interaction, the particles will move far apart again. At this time, find the velocity of (c) the 2.00-g particle and (d) the 5.00-g particle.
56. **Review.** From a large distance away, a particle of mass m_1 and positive charge q_1 is fired at speed v in the positive x direction straight toward a second particle, originally stationary but free to move, with mass m_2 and positive charge q_2 . Both particles are constrained to move only along the x axis. (a) At the instant of closest approach, both particles will be moving at the same velocity. Find this velocity. (b) Find the distance of closest approach. After the interaction, the particles will move far apart again. At this time, find the velocity of (c) the particle of mass m_1 and (d) the particle of mass m_2 .
57. The liquid-drop model of the atomic nucleus suggests high-energy oscillations of certain nuclei can split the nucleus into two unequal fragments plus a few

neutrons. The fission products acquire kinetic energy from their mutual Coulomb repulsion. Assume the charge is distributed uniformly throughout the volume of each spherical fragment and, immediately before separating, each fragment is at rest and their surfaces are in contact. The electrons surrounding the nucleus can be ignored. Calculate the electric potential energy (in electron volts) of two spherical fragments from a uranium nucleus having the following charges and radii: $38e$ and 5.50×10^{-15} m, and $54e$ and 6.20×10^{-15} m.

58. On a dry winter day, you scuff your leather-soled shoes across a carpet and get a shock when you extend the tip of one finger toward a metal doorknob. In a dark room, you see a spark perhaps 5 mm long. Make order-of-magnitude estimates of (a) your electric potential and (b) the charge on your body before you touch the doorknob. Explain your reasoning.
59. The electric potential immediately outside a charged conducting sphere is 200 V, and 10.0 cm farther from the center of the sphere the potential is 150 V. Determine (a) the radius of the sphere and (b) the charge on it. The electric potential immediately outside another charged conducting sphere is 210 V, and 10.0 cm farther from the center the magnitude of the electric field is 400 V/m. Determine (c) the radius of the sphere and (d) its charge on it. (e) Are the answers to parts (c) and (d) unique?
60. (a) Use the exact result from Example 25.4 to find the electric potential created by the dipole described in the example at the point $(3a, 0)$. (b) Explain how this answer compares with the result of the approximate expression that is valid when x is much greater than a .
61. Calculate the work that must be done on charges brought from infinity to charge a spherical shell of radius $R = 0.100$ m to a total charge $Q = 125 \mu\text{C}$.
62. Calculate the work that must be done on charges brought from infinity to charge a spherical shell of radius R to a total charge Q .

63. The electric potential everywhere on the xy plane is

$$V = \frac{36}{\sqrt{(x+1)^2 + y^2}} - \frac{45}{\sqrt{x^2 + (y-2)^2}}$$

where V is in volts and x and y are in meters. Determine the position and charge on each of the particles that create this potential.

64. Why is the following situation impossible? You set up an apparatus in your laboratory as follows. The x axis is the symmetry axis of a stationary, uniformly charged ring of radius $R = 0.500$ m and charge $Q = 50.0 \mu\text{C}$ (Fig. P25.64). You place a particle with charge

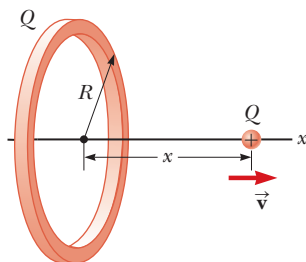


Figure P25.64

$Q = 50.0 \mu\text{C}$ and mass $m = 0.100$ kg at the center of the ring and arrange for it to be constrained to move only along the x axis. When it is displaced slightly, the particle is repelled by the ring and accelerates along the x axis. The particle moves faster than you expected and strikes the opposite wall of your laboratory at 40.0 m/s.

65. From Gauss's law, the electric field set up by a uniform line of charge is

$$\vec{E} = \left(\frac{\lambda}{2\pi\epsilon_0 r} \right) \hat{r}$$

where \hat{r} is a unit vector pointing radially away from the line and λ is the linear charge density along the line. Derive an expression for the potential difference between $r = r_1$ and $r = r_2$.

66. A uniformly charged filament lies along the x axis between $x = a = 1.00$ m and $x = a + \ell = 3.00$ m as shown in Figure P25.66. The total charge on the filament is 1.60 nC. Calculate successive approximations for the electric potential at the origin by modeling the filament as (a) a single charged particle at $x = 2.00$ m, (b) two 0.800-nC charged particles at $x = 1.5$ m and $x = 2.5$ m, and (c) four 0.400-nC charged particles at $x = 1.25$ m, $x = 1.75$ m, $x = 2.25$ m, and $x = 2.75$ m. (d) Explain how the results compare with the potential given by the exact expression

$$V = \frac{k_e Q}{\ell} \ln \left(\frac{\ell + a}{a} \right)$$

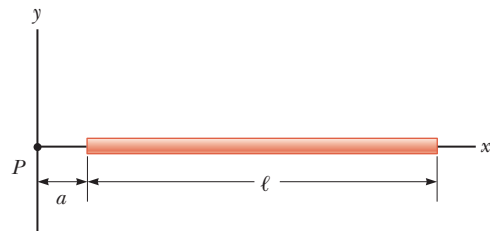


Figure P25.66

67. The thin, uniformly charged rod shown in Figure P25.67 has a linear charge density λ . Find an expression for the electric potential at P .

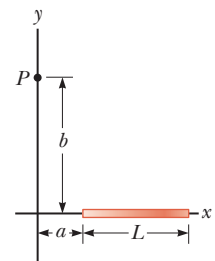


Figure P25.67

68. A Geiger-Mueller tube is a radiation detector that consists of a closed, hollow, metal cylinder (the cathode) of inner radius r_a and a coaxial cylindrical wire (the anode) of radius r_b (Fig. P25.68a).

The charge per unit length on the anode is λ , and the charge per unit length on the cathode is $-\lambda$. A gas fills the space between the electrodes. When the tube is in use (Fig. P25.68b) and a high-energy elementary particle passes through this space, it can ionize an atom of the gas. The strong electric field makes the resulting ion and electron accelerate in opposite directions. They strike other molecules of the gas to ionize them, producing an avalanche of electrical discharge. The

pulse of electric current between the wire and the cylinder is counted by an external circuit. (a) Show that the magnitude of the electric potential difference between the wire and the cylinder is

$$\Delta V = 2k_e \lambda \ln \left(\frac{r_a}{r_b} \right)$$

(b) Show that the magnitude of the electric field in the space between cathode and anode is

$$E = \frac{\Delta V}{\ln(r_a/r_b)} \left(\frac{1}{r} \right)$$

where r is the distance from the axis of the anode to the point where the field is to be calculated.

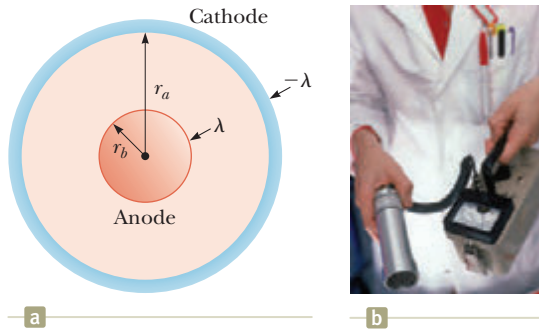


Figure P25.68

69. **Review.** Two parallel plates having charges of equal magnitude but opposite sign are separated by 12.0 cm. Each plate has a surface charge density of 36.0 nC/m². A proton is released from rest at the positive plate. Determine (a) the magnitude of the electric field between the plates from the charge density, (b) the potential difference between the plates, (c) the kinetic energy of the proton when it reaches the negative plate, (d) the speed of the proton just before it strikes the negative plate, (e) the acceleration of the proton, and (f) the force on the proton. (g) From the force, find the magnitude of the electric field. (h) How does your value of the electric field compare with that found in part (a)?
70. When an uncharged conducting sphere of radius a is placed at the origin of an xyz coordinate system that lies in an initially uniform electric field $\vec{E} = E_0 \hat{k}$, the resulting electric potential is $V(x, y, z) = V_0$ for points inside the sphere and

$$V(x, y, z) = V_0 - E_0 z + \frac{E_0 a^3 z}{(x^2 + y^2 + z^2)^{3/2}}$$

for points outside the sphere, where V_0 is the (constant) electric potential on the conductor. Use this equation to determine the x , y , and z components of the resulting electric field (a) inside the sphere and (b) outside the sphere.

Challenge Problems

71. An electric dipole is located along the y axis as shown in Figure P25.71. The magnitude of its electric dipole moment is defined as $p = 2aq$. (a) At a point P , which

is far from the dipole ($r \gg a$), show that the electric potential is

$$V = \frac{k_e p \cos \theta}{r^2}$$

(b) Calculate the radial component E_r and the perpendicular component E_θ of the associated electric field. Note that $E_\theta = -(1/r)(\partial V/\partial \theta)$. Do these results seem reasonable for (c) $\theta = 90^\circ$ and 0° ? (d) For $r = 0$? (e) For the dipole arrangement shown in Figure P25.71, express V in terms of Cartesian coordinates using $r = (x^2 + y^2)^{1/2}$ and

$$\cos \theta = \frac{y}{(x^2 + y^2)^{1/2}}$$

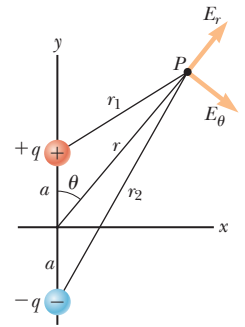


Figure P25.71

(f) Using these results and again taking $r \gg a$, calculate the field components E_x and E_y .

72. A solid sphere of radius R has a uniform charge density ρ and total charge Q . Derive an expression for its total electric potential energy. *Suggestion:* Imagine the sphere is constructed by adding successive layers of concentric shells of charge $dq = (4\pi r^2 dr)\rho$ and use $dU = V dq$.

73. A disk of radius R (Fig. P25.73) has a nonuniform surface charge density $\sigma = Cr$, where C is a constant and r is measured from the center of the disk to a point on the surface of the disk. Find (by direct integration) the electric potential at P .

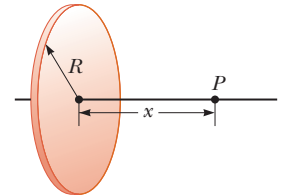


Figure P25.73

74. Four balls, each with mass m , are connected by four nonconducting strings to form a square with side a as shown in Figure P25.74. The assembly is placed on a nonconducting, frictionless, horizontal surface. Balls 1 and 2 each have charge q , and balls 3 and 4 are uncharged. After the string connecting balls 1 and 2 is cut, what is the maximum speed of balls 3 and 4?

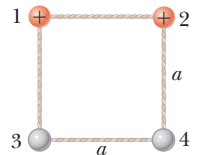


Figure P25.74

75. (a) A uniformly charged cylindrical shell with no end caps has total charge Q , radius R , and length h . Determine the electric potential at a point a distance d from the right end of the cylinder as shown in Figure P25.75.

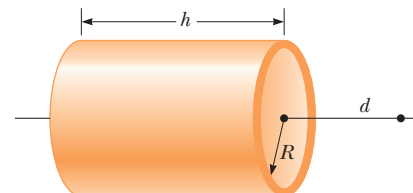


Figure P25.75

Suggestion: Use the result of Example 25.5 by treating the cylinder as a collection of ring charges. (b) **What If?** Use the result of Example 25.6 to solve the same problem for a solid cylinder.

76. As shown in Figure P25.76, two large, parallel, vertical conducting plates separated by distance d are charged so that their potentials are $+V_0$ and $-V_0$. A small conducting ball of mass m and radius R (where $R \ll d$) hangs midway between the plates. The thread of length L supporting the ball is a conducting wire connected to ground, so the potential of the ball is fixed at $V = 0$. The ball hangs straight down in stable equilibrium when V_0 is sufficiently small. Show that

the equilibrium of the ball is unstable if V_0 exceeds the critical value $[k_e d^2 mg / (4RL)]^{1/2}$. *Suggestion:* Consider the forces on the ball when it is displaced a distance $x \ll L$.

77. A particle with charge q is located at $x = -R$, and a particle with charge $-2q$ is located at the origin. Prove that the equipotential surface that has zero potential is a sphere centered at $(-4R/3, 0, 0)$ and having a radius $r = \frac{2}{3}R$.

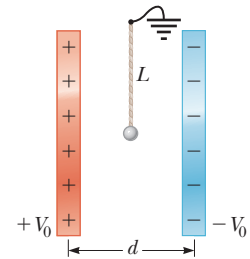


Figure P25.76

Capacitance and Dielectrics



- 26.1 Definition of Capacitance
- 26.2 Calculating Capacitance
- 26.3 Combinations of Capacitors
- 26.4 Energy Stored in a Charged Capacitor
- 26.5 Capacitors with Dielectrics
- 26.6 Electric Dipole in an Electric Field
- 26.7 An Atomic Description of Dielectrics

In this chapter, we introduce the first of three simple circuit elements that can be connected with wires to form an electric circuit. Electric circuits are the basis for the vast majority of the devices used in our society. Here we shall discuss *capacitors*, devices that store electric charge. This discussion is followed by the study of *resistors* in Chapter 27 and *inductors* in Chapter 32. In later chapters, we will study more sophisticated circuit elements such as *diodes* and *transistors*.

Capacitors are commonly used in a variety of electric circuits. For instance, they are used to tune the frequency of radio receivers, as filters in power supplies, to eliminate sparking in automobile ignition systems, and as energy-storing devices in electronic flash units.

26.1 Definition of Capacitance

Consider two conductors as shown in Figure 26.1 (page 778). Such a combination of two conductors is called a **capacitor**. The conductors are called *plates*. If the conductors carry charges of equal magnitude and opposite sign, a potential difference ΔV exists between them.

When a patient receives a shock from a defibrillator, the energy delivered to the patient is initially stored in a *capacitor*. We will study capacitors and capacitance in this chapter. (Andrew Olney/Getty Images)

Pitfall Prevention 26.1

Capacitance Is a Capacity To understand capacitance, think of similar notions that use a similar word. The *capacity* of a milk carton is the volume of milk it can store. The *heat capacity* of an object is the amount of energy an object can store per unit of temperature difference. The *capacitance* of a capacitor is the amount of charge the capacitor can store per unit of potential difference.

Pitfall Prevention 26.2**Potential Difference Is ΔV , Not V**

We use the symbol ΔV for the potential difference across a circuit element or a device because this notation is consistent with our definition of potential difference and with the meaning of the delta sign. It is a common but confusing practice to use the symbol V without the delta sign for both a potential and a potential difference. Keep that in mind if you consult other texts.

Definition of capacitance ▶

When the capacitor is connected to the terminals of a battery, electrons transfer between the plates and the wires so that the plates become charged.

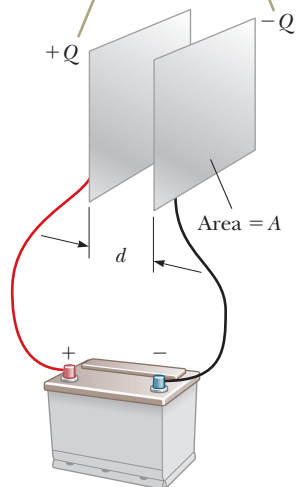
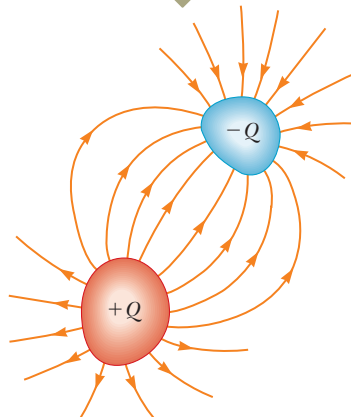


Figure 26.2 A parallel-plate capacitor consists of two parallel conducting plates, each of area A , separated by a distance d .

Figure 26.1 A capacitor consists of two conductors.

When the capacitor is charged, the conductors carry charges of equal magnitude and opposite sign.



What determines how much charge is on the plates of a capacitor for a given voltage? Experiments show that the quantity of charge Q on a capacitor¹ is linearly proportional to the potential difference between the conductors; that is, $Q \propto \Delta V$. The proportionality constant depends on the shape and separation of the conductors.² This relationship can be written as $Q = C \Delta V$ if we define capacitance as follows:

The **capacitance** C of a capacitor is defined as the ratio of the magnitude of the charge on either conductor to the magnitude of the potential difference between the conductors:

$$C \equiv \frac{Q}{\Delta V} \quad (26.1)$$

By definition *capacitance is always a positive quantity*. Furthermore, the charge Q and the potential difference ΔV are always expressed in Equation 26.1 as positive quantities.

From Equation 26.1, we see that capacitance has SI units of coulombs per volt. Named in honor of Michael Faraday, the SI unit of capacitance is the **farad** (F):

$$1 \text{ F} = 1 \text{ C/V}$$

The farad is a very large unit of capacitance. In practice, typical devices have capacitances ranging from microfarads (10^{-6} F) to picofarads (10^{-12} F). We shall use the symbol μF to represent microfarads. In practice, to avoid the use of Greek letters, physical capacitors are often labeled “mF” for microfarads and “mmF” for micromicrofarads or, equivalently, “pF” for picofarads.

Let’s consider a capacitor formed from a pair of parallel plates as shown in Figure 26.2. Each plate is connected to one terminal of a battery, which acts as a source of potential difference. If the capacitor is initially uncharged, the battery establishes an electric field in the connecting wires when the connections are made. Let’s focus on the plate connected to the negative terminal of the battery. The electric field in the wire applies a force on electrons in the wire immediately outside this plate; this force causes the electrons to move onto the plate. The movement continues until the plate, the wire, and the terminal are all at the same electric potential. Once this equilibrium situation is attained, a potential difference no longer exists between the terminal and the plate; as a result, no electric field is present in the wire and

¹Although the total charge on the capacitor is zero (because there is as much excess positive charge on one conductor as there is excess negative charge on the other), it is common practice to refer to the magnitude of the charge on either conductor as “the charge on the capacitor.”

²The proportionality between Q and ΔV can be proven from Coulomb’s law or by experiment.

the electrons stop moving. The plate now carries a negative charge. A similar process occurs at the other capacitor plate, where electrons move from the plate to the wire, leaving the plate positively charged. In this final configuration, the potential difference across the capacitor plates is the same as that between the terminals of the battery.

- Quick Quiz 26.1** A capacitor stores charge Q at a potential difference ΔV . What happens if the voltage applied to the capacitor by a battery is doubled to $2\Delta V$?
- (a) The capacitance falls to half its initial value, and the charge remains the same.
 - (b) The capacitance and the charge both fall to half their initial values.
 - (c) The capacitance and the charge both double.
 - (d) The capacitance remains the same, and the charge doubles.

26.2 Calculating Capacitance

We can derive an expression for the capacitance of a pair of oppositely charged conductors having a charge of magnitude Q in the following manner. First we calculate the potential difference using the techniques described in Chapter 25. We then use the expression $C = Q/\Delta V$ to evaluate the capacitance. The calculation is relatively easy if the geometry of the capacitor is simple.

Although the most common situation is that of two conductors, a single conductor also has a capacitance. For example, imagine a single spherical, charged conductor. The electric field lines around this conductor are exactly the same as if there were a conducting, spherical shell of infinite radius, concentric with the sphere and carrying a charge of the same magnitude but opposite sign. Therefore, we can identify the imaginary shell as the second conductor of a two-conductor capacitor. The electric potential of the sphere of radius a is simply $k_e Q/a$ (see Section 25.6), and setting $V = 0$ for the infinitely large shell gives

$$C = \frac{Q}{\Delta V} = \frac{Q}{k_e Q/a} = \frac{a}{k_e} = 4\pi\epsilon_0 a \quad (26.2)$$

This expression shows that the capacitance of an isolated, charged sphere is proportional to its radius and is independent of both the charge on the sphere and its potential, as is the case with all capacitors. Equation 26.1 is the general definition of capacitance in terms of electrical parameters, but the capacitance of a given capacitor will depend only on the geometry of the plates.

The capacitance of a pair of conductors is illustrated below with three familiar geometries, namely, parallel plates, concentric cylinders, and concentric spheres. In these calculations, we assume the charged conductors are separated by a vacuum.

Parallel-Plate Capacitors

Two parallel, metallic plates of equal area A are separated by a distance d as shown in Figure 26.2. One plate carries a charge $+Q$, and the other carries a charge $-Q$. The surface charge density on each plate is $\sigma = Q/A$. If the plates are very close together (in comparison with their length and width), we can assume the electric field is uniform between the plates and zero elsewhere. According to the What If? feature of Example 24.5, the value of the electric field between the plates is

$$E = \frac{\sigma}{\epsilon_0} = \frac{Q}{\epsilon_0 A}$$

Because the field between the plates is uniform, the magnitude of the potential difference between the plates equals Ed (see Eq. 25.6); therefore,

$$\Delta V = Ed = \frac{Qd}{\epsilon_0 A}$$

Pitfall Prevention 26.3

Too Many Cs Do not confuse an italic C for capacitance with a non-italic C for the unit coulomb.

◀ Capacitance of an isolated charged sphere

Substituting this result into Equation 26.1, we find that the capacitance is

$$C = \frac{Q}{\Delta V} = \frac{Q}{Qd/\epsilon_0 A}$$

$$C = \frac{\epsilon_0 A}{d} \quad (26.3)$$

Capacitance of parallel plates ►

That is, the capacitance of a parallel-plate capacitor is proportional to the area of its plates and inversely proportional to the plate separation.

Let's consider how the geometry of these conductors influences the capacity of the pair of plates to store charge. As a capacitor is being charged by a battery, electrons flow into the negative plate and out of the positive plate. If the capacitor plates are large, the accumulated charges are able to distribute themselves over a substantial area and the amount of charge that can be stored on a plate for a given potential difference increases as the plate area is increased. Therefore, it is reasonable that the capacitance is proportional to the plate area A as in Equation 26.3.

Now consider the region that separates the plates. Imagine moving the plates closer together. Consider the situation before any charges have had a chance to move in response to this change. Because no charges have moved, the electric field between the plates has the same value but extends over a shorter distance. Therefore, the magnitude of the potential difference between the plates $\Delta V = Ed$ (Eq. 25.6) is smaller. The difference between this new capacitor voltage and the terminal voltage of the battery appears as a potential difference across the wires connecting the battery to the capacitor, resulting in an electric field in the wires that drives more charge onto the plates and increases the potential difference between the plates. When the potential difference between the plates again matches that of the battery, the flow of charge stops. Therefore, moving the plates closer together causes the charge on the capacitor to increase. If d is increased, the charge decreases. As a result, the inverse relationship between C and d in Equation 26.3 is reasonable.

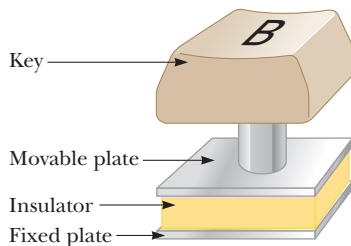


Figure 26.3 (Quick Quiz 26.2) One type of computer keyboard button.

Quick Quiz 26.2 Many computer keyboard buttons are constructed of capacitors as shown in Figure 26.3. When a key is pushed down, the soft insulator between the movable plate and the fixed plate is compressed. When the key is pressed, what happens to the capacitance? (a) It increases. (b) It decreases. (c) It changes in a way you cannot determine because the electric circuit connected to the keyboard button may cause a change in ΔV .

Example 26.1 The Cylindrical Capacitor

A solid cylindrical conductor of radius a and charge Q is coaxial with a cylindrical shell of negligible thickness, radius $b > a$, and charge $-Q$ (Fig. 26.4a). Find the capacitance of this cylindrical capacitor if its length is ℓ .

SOLUTION

Conceptualize Recall that any pair of conductors qualifies as a capacitor, so the system described in this example therefore qualifies. Figure 26.4b helps visualize the electric field between the conductors. We expect the capacitance to depend only on geometric factors, which, in this case, are a , b , and ℓ .

Categorize Because of the cylindrical symmetry of the system, we can use results from previous studies of cylindrical systems to find the capacitance.

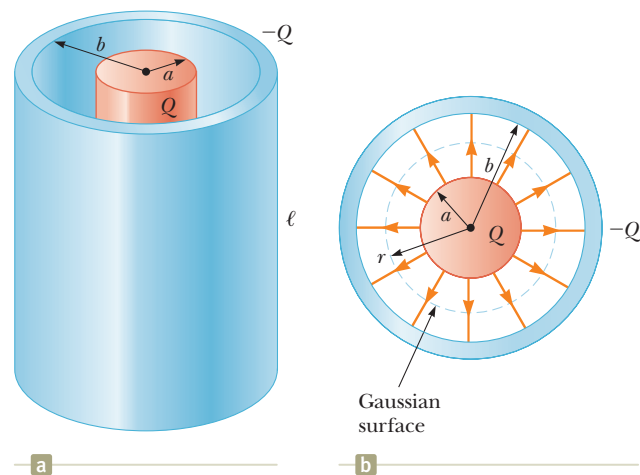


Figure 26.4 (Example 26.1) (a) A cylindrical capacitor consists of a solid cylindrical conductor of radius a and length ℓ surrounded by a coaxial cylindrical shell of radius b . (b) End view. The electric field lines are radial. The dashed line represents the end of a cylindrical gaussian surface of radius r and length ℓ .

26.1 continued

Analyze Assuming ℓ is much greater than a and b , we can neglect end effects. In this case, the electric field is perpendicular to the long axis of the cylinders and is confined to the region between them (Fig. 26.4b).

Write an expression for the potential difference between the two cylinders from Equation 25.3:

$$V_b - V_a = - \int_a^b \vec{\mathbf{E}} \cdot d\vec{\mathbf{s}}$$

Apply Equation 24.7 for the electric field outside a cylindrically symmetric charge distribution and notice from Figure 26.4b that $\vec{\mathbf{E}}$ is parallel to $d\vec{\mathbf{s}}$ along a radial line:

$$V_b - V_a = - \int_a^b E_r dr = -2k_e \lambda \int_a^b \frac{dr}{r} = -2k_e \lambda \ln \left(\frac{b}{a} \right)$$

Substitute the absolute value of ΔV into Equation 26.1 and use $\lambda = Q/\ell$:

$$C = \frac{Q}{\Delta V} = \frac{Q}{(2k_e Q/\ell) \ln(b/a)} = \frac{\ell}{2k_e \ln(b/a)} \quad (26.4)$$

Finalize The capacitance depends on the radii a and b and is proportional to the length of the cylinders. Equation 26.4 shows that the capacitance per unit length of a combination of concentric cylindrical conductors is

$$\frac{C}{\ell} = \frac{1}{2k_e \ln(b/a)} \quad (26.5)$$

An example of this type of geometric arrangement is a *coaxial cable*, which consists of two concentric cylindrical conductors separated by an insulator. You probably have a coaxial cable attached to your television set if you are a subscriber to cable television. The coaxial cable is especially useful for shielding electrical signals from any possible external influences.

WHAT IF? Suppose $b = 2.00a$ for the cylindrical capacitor. You would like to increase the capacitance, and you can do so by choosing to increase either ℓ by 10% or a by 10%. Which choice is more effective at increasing the capacitance?

Answer According to Equation 26.4, C is proportional to ℓ , so increasing ℓ by 10% results in a 10% increase in C . For the result of the change in a , let's use Equation 26.4 to set up a ratio of the capacitance C' for the enlarged cylinder radius a' to the original capacitance:

$$\frac{C'}{C} = \frac{\ell/2k_e \ln(b/a')}{\ell/2k_e \ln(b/a)} = \frac{\ln(b/a)}{\ln(b/a')}$$

We now substitute $b = 2.00a$ and $a' = 1.10a$, representing a 10% increase in a :

$$\frac{C'}{C} = \frac{\ln(2.00a/a)}{\ln(2.00a/1.10a)} = \frac{\ln 2.00}{\ln 1.82} = 1.16$$

which corresponds to a 16% increase in capacitance. Therefore, it is more effective to increase a than to increase ℓ .

Note two more extensions of this problem. First, it is advantageous to increase a only for a range of relationships between a and b . If $b > 2.85a$, increasing ℓ by 10% is more effective than increasing a (see Problem 70). Second, if b decreases, the capacitance increases. Increasing a or decreasing b has the effect of bringing the plates closer together, which increases the capacitance.

Example 26.2 The Spherical Capacitor

A spherical capacitor consists of a spherical conducting shell of radius b and charge $-Q$ concentric with a smaller conducting sphere of radius a and charge Q (Fig. 26.5, page 782). Find the capacitance of this device.

SOLUTION

Conceptualize As with Example 26.1, this system involves a pair of conductors and qualifies as a capacitor. We expect the capacitance to depend on the spherical radii a and b .

continued

26.2 continued

Categorize Because of the spherical symmetry of the system, we can use results from previous studies of spherical systems to find the capacitance.

Analyze As shown in Chapter 24, the direction of the electric field outside a spherically symmetric charge distribution is radial and its magnitude is given by the expression $E = k_e Q / r^2$. In this case, this result applies to the field *between* the spheres ($a < r < b$).

Write an expression for the potential difference between the two conductors from Equation 25.3:

Apply the result of Example 24.3 for the electric field outside a spherically symmetric charge distribution and note that \vec{E} is parallel to $d\vec{s}$ along a radial line:

Substitute the absolute value of ΔV into Equation 26.1:

Finalize The capacitance depends on a and b as expected. The potential difference between the spheres in Equation (1) is negative because Q is positive and $b > a$. Therefore, in Equation 26.6, when we take the absolute value, we change $a - b$ to $b - a$. The result is a positive number.

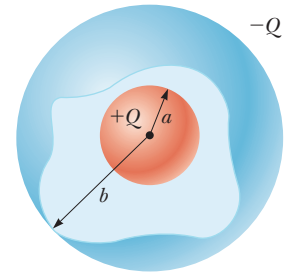
WHAT IF? If the radius b of the outer sphere approaches infinity, what does the capacitance become?

Answer In Equation 26.6, we let $b \rightarrow \infty$:

$$C = \lim_{b \rightarrow \infty} \frac{ab}{k_e(b-a)} = \frac{ab}{k_e(b)} = \frac{a}{k_e} = 4\pi\epsilon_0 a$$

Notice that this expression is the same as Equation 26.2, the capacitance of an isolated spherical conductor.

Figure 26.5 (Example 26.2) A spherical capacitor consists of an inner sphere of radius a surrounded by a concentric spherical shell of radius b . The electric field between the spheres is directed radially outward when the inner sphere is positively charged.



$$V_b - V_a = - \int_a^b \vec{E} \cdot d\vec{s}$$

$$V_b - V_a = - \int_a^b E_r dr = -k_e Q \int_a^b \frac{dr}{r^2} = k_e Q \left[\frac{1}{r} \right]_a^b$$

$$(1) \quad V_b - V_a = k_e Q \left(\frac{1}{b} - \frac{1}{a} \right) = k_e Q \frac{a-b}{ab}$$

$$C = \frac{Q}{\Delta V} = \frac{Q}{|V_b - V_a|} = \frac{ab}{k_e(b-a)} \quad (26.6)$$

Capacitor symbol

Battery symbol

Switch symbol

Figure 26.6 Circuit symbols for capacitors, batteries, and switches. Notice that capacitors are in blue, batteries are in green, and switches are in red. The closed switch can carry current, whereas the open one cannot.

26.3 Combinations of Capacitors

Two or more capacitors often are combined in electric circuits. We can calculate the equivalent capacitance of certain combinations using methods described in this section. Throughout this section, we assume the capacitors to be combined are initially uncharged.

In studying electric circuits, we use a simplified pictorial representation called a **circuit diagram**. Such a diagram uses **circuit symbols** to represent various circuit elements. The circuit symbols are connected by straight lines that represent the wires between the circuit elements. The circuit symbols for capacitors, batteries, and switches as well as the color codes used for them in this text are given in Figure 26.6. The symbol for the capacitor reflects the geometry of the most common model for a capacitor, a pair of parallel plates. The positive terminal of the battery is at the higher potential and is represented in the circuit symbol by the longer line.

Parallel Combination

Two capacitors connected as shown in Figure 26.7a are known as a **parallel combination** of capacitors. Figure 26.7b shows a circuit diagram for this combination of capacitors. The left plates of the capacitors are connected to the positive terminal of the battery by a conducting wire and are therefore both at the same electric potential

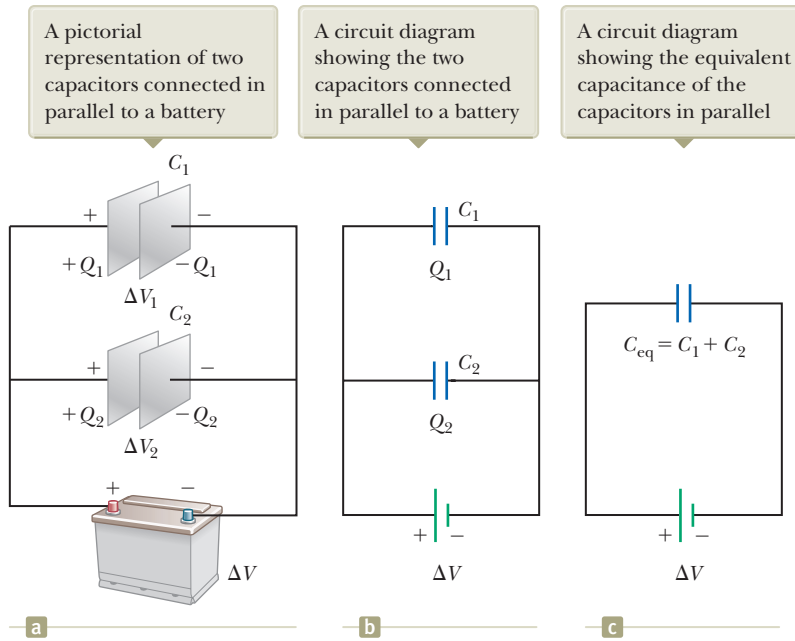


Figure 26.7 Two capacitors connected in parallel. All three diagrams are equivalent.

as the positive terminal. Likewise, the right plates are connected to the negative terminal and so are both at the same potential as the negative terminal. Therefore, the individual potential differences across capacitors connected in parallel are the same and are equal to the potential difference applied across the combination. That is,

$$\Delta V_1 = \Delta V_2 = \Delta V$$

where ΔV is the battery terminal voltage.

After the battery is attached to the circuit, the capacitors quickly reach their maximum charge. Let's call the maximum charges on the two capacitors Q_1 and Q_2 , where $Q_1 = C_1\Delta V_1$ and $Q_2 = C_2\Delta V_2$. The *total charge* Q_{tot} stored by the two capacitors is the sum of the charges on the individual capacitors:

$$Q_{\text{tot}} = Q_1 + Q_2 = C_1\Delta V_1 + C_2\Delta V_2 \quad (26.7)$$

Suppose you wish to replace these two capacitors by one *equivalent capacitor* having a capacitance C_{eq} as in Figure 26.7c. The effect this equivalent capacitor has on the circuit must be exactly the same as the effect of the combination of the two individual capacitors. That is, the equivalent capacitor must store charge Q_{tot} when connected to the battery. Figure 26.7c shows that the voltage across the equivalent capacitor is ΔV because the equivalent capacitor is connected directly across the battery terminals. Therefore, for the equivalent capacitor,

$$Q_{\text{tot}} = C_{\text{eq}} \Delta V$$

Substituting this result into Equation 26.7 gives

$$C_{\text{eq}} \Delta V = C_1 \Delta V_1 + C_2 \Delta V_2$$

$$C_{\text{eq}} = C_1 + C_2 \quad (\text{parallel combination})$$

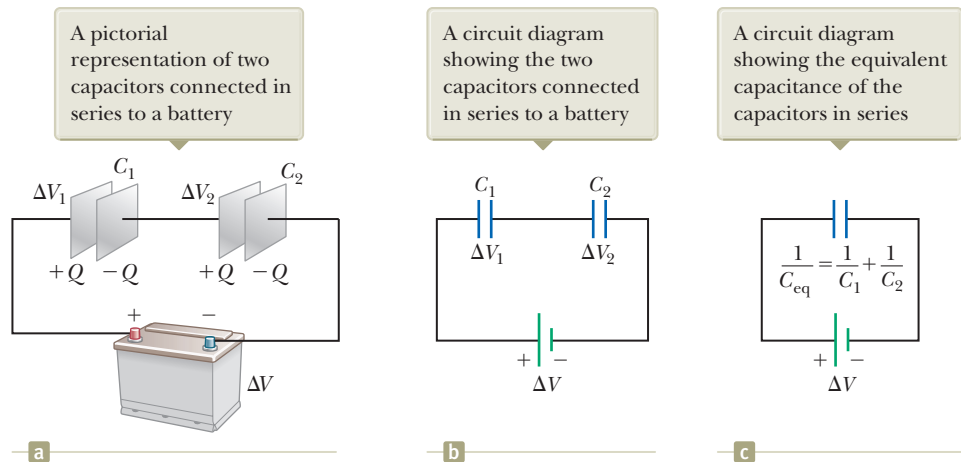
where we have canceled the voltages because they are all the same. If this treatment is extended to three or more capacitors connected in parallel, the **equivalent capacitance** is found to be

$$C_{\text{eq}} = C_1 + C_2 + C_3 + \cdots \quad (\text{parallel combination}) \quad (26.8)$$

◀ **Equivalent capacitance for capacitors in parallel**

Therefore, the equivalent capacitance of a parallel combination of capacitors is (1) the algebraic sum of the individual capacitances and (2) greater than any of

Figure 26.8 Two capacitors connected in series. All three diagrams are equivalent.



the individual capacitances. Statement (2) makes sense because we are essentially combining the areas of all the capacitor plates when they are connected with conducting wire, and capacitance of parallel plates is proportional to area (Eq. 26.3).

Series Combination

Two capacitors connected as shown in Figure 26.8a and the equivalent circuit diagram in Figure 26.8b are known as a **series combination** of capacitors. The left plate of capacitor 1 and the right plate of capacitor 2 are connected to the terminals of a battery. The other two plates are connected to each other and to nothing else; hence, they form an isolated system that is initially uncharged and must continue to have zero net charge. To analyze this combination, let's first consider the uncharged capacitors and then follow what happens immediately after a battery is connected to the circuit. When the battery is connected, electrons are transferred out of the left plate of C_1 and into the right plate of C_2 . As this negative charge accumulates on the right plate of C_2 , an equivalent amount of negative charge is forced off the left plate of C_2 , and this left plate therefore has an excess positive charge. The negative charge leaving the left plate of C_2 causes negative charges to accumulate on the right plate of C_1 . As a result, both right plates end up with a charge $-Q$ and both left plates end up with a charge $+Q$. Therefore, the charges on capacitors connected in series are the same:

$$Q_1 = Q_2 = Q$$

where Q is the charge that moved between a wire and the connected outside plate of one of the capacitors.

Figure 26.8a shows the individual voltages ΔV_1 and ΔV_2 across the capacitors. These voltages add to give the total voltage ΔV_{tot} across the combination:

$$\Delta V_{\text{tot}} = \Delta V_1 + \Delta V_2 = \frac{Q_1}{C_1} + \frac{Q_2}{C_2} \quad (26.9)$$

In general, the total potential difference across any number of capacitors connected in series is the sum of the potential differences across the individual capacitors.

Suppose the equivalent single capacitor in Figure 26.8c has the same effect on the circuit as the series combination when it is connected to the battery. After it is fully charged, the equivalent capacitor must have a charge of $-Q$ on its right plate and a charge of $+Q$ on its left plate. Applying the definition of capacitance to the circuit in Figure 26.8c gives

$$\Delta V_{\text{tot}} = \frac{Q}{C_{\text{eq}}}$$

Substituting this result into Equation 26.9, we have

$$\frac{Q}{C_{\text{eq}}} = \frac{Q_1}{C_1} + \frac{Q_2}{C_2}$$

Canceling the charges because they are all the same gives

$$\frac{1}{C_{\text{eq}}} = \frac{1}{C_1} + \frac{1}{C_2} \quad (\text{series combination})$$

When this analysis is applied to three or more capacitors connected in series, the relationship for the **equivalent capacitance** is

$$\frac{1}{C_{\text{eq}}} = \frac{1}{C_1} + \frac{1}{C_2} + \frac{1}{C_3} + \cdots \quad (\text{series combination}) \quad (26.10)$$

◀ **Equivalent capacitance for capacitors in series**

This expression shows that (1) the inverse of the equivalent capacitance is the algebraic sum of the inverses of the individual capacitances and (2) the equivalent capacitance of a series combination is always less than any individual capacitance in the combination.

- Quick Quiz 26.3** Two capacitors are identical. They can be connected in series or in parallel. If you want the *smallest* equivalent capacitance for the combination, how should you connect them? (a) in series (b) in parallel (c) either way because both combinations have the same capacitance

Example 26.3 Equivalent Capacitance

Find the equivalent capacitance between a and b for the combination of capacitors shown in Figure 26.9a. All capacitances are in microfarads.

SOLUTION

Conceptualize Study Figure 26.9a carefully and make sure you understand how the capacitors are connected. Verify that there are only series and parallel connections between capacitors.

Categorize Figure 26.9a shows that the circuit contains both series and parallel connections, so we use the rules for series and parallel combinations discussed in this section.

Analyze Using Equations 26.8 and 26.10, we reduce the combination step by step as indicated in the figure. As you follow along below, notice that in each step we replace the combination of two capacitors in the circuit diagram with a single capacitor having the equivalent capacitance.

The $1.0\text{-}\mu\text{F}$ and $3.0\text{-}\mu\text{F}$ capacitors (upper red-brown circle in Fig. 26.9a) are in parallel. Find the equivalent capacitance from Equation 26.8:

$$C_{\text{eq}} = C_1 + C_2 = 4.0 \mu\text{F}$$

The $2.0\text{-}\mu\text{F}$ and $6.0\text{-}\mu\text{F}$ capacitors (lower red-brown circle in Fig. 26.9a) are also in parallel:

$$C_{\text{eq}} = C_1 + C_2 = 8.0 \mu\text{F}$$

The circuit now looks like Figure 26.9b. The two $4.0\text{-}\mu\text{F}$ capacitors (upper green circle in Fig. 26.9b) are in series. Find the equivalent capacitance from Equation 26.10:

$$\frac{1}{C_{\text{eq}}} = \frac{1}{C_1} + \frac{1}{C_2} = \frac{1}{4.0 \mu\text{F}} + \frac{1}{4.0 \mu\text{F}} = \frac{1}{2.0 \mu\text{F}}$$

$$C_{\text{eq}} = 2.0 \mu\text{F}$$

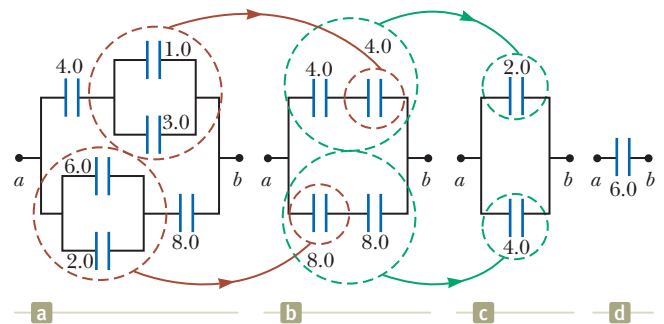


Figure 26.9 (Example 26.3) To find the equivalent capacitance of the capacitors in (a), we reduce the various combinations in steps as indicated in (b), (c), and (d), using the series and parallel rules described in the text. All capacitances are in microfarads.

continued

26.3 continued

The two $8.0\text{-}\mu\text{F}$ capacitors (lower green circle in Fig. 26.9b) are also in series. Find the equivalent capacitance from Equation 26.10:

$$\frac{1}{C_{\text{eq}}} = \frac{1}{C_1} + \frac{1}{C_2} = \frac{1}{8.0\ \mu\text{F}} + \frac{1}{8.0\ \mu\text{F}} = \frac{1}{4.0\ \mu\text{F}}$$

$$C_{\text{eq}} = 4.0\ \mu\text{F}$$

The circuit now looks like Figure 26.9c. The $2.0\text{-}\mu\text{F}$ and $4.0\text{-}\mu\text{F}$ capacitors are in parallel:

$$C_{\text{eq}} = C_1 + C_2 = 6.0\ \mu\text{F}$$

Finalize This final value is that of the single equivalent capacitor shown in Figure 26.9d. For further practice in treating circuits with combinations of capacitors, imagine a battery is connected between points *a* and *b* in Figure 26.9a so that a potential difference ΔV is established across the combination. Can you find the voltage across and the charge on each capacitor?

26.4 Energy Stored in a Charged Capacitor

Because positive and negative charges are separated in the system of two conductors in a capacitor, electric potential energy is stored in the system. Many of those who work with electronic equipment have at some time verified that a capacitor can store energy. If the plates of a charged capacitor are connected by a conductor such as a wire, charge moves between each plate and its connecting wire until the capacitor is uncharged. The discharge can often be observed as a visible spark. If you accidentally touch the opposite plates of a charged capacitor, your fingers act as a pathway for discharge and the result is an electric shock. The degree of shock you receive depends on the capacitance and the voltage applied to the capacitor. Such a shock could be dangerous if high voltages are present as in the power supply of a home theater system. Because the charges can be stored in a capacitor even when the system is turned off, unplugging the system does not make it safe to open the case and touch the components inside.

Figure 26.10a shows a battery connected to a single parallel-plate capacitor with a switch in the circuit. Let us identify the circuit as a system. When the switch is closed (Fig. 26.10b), the battery establishes an electric field in the wires and charges

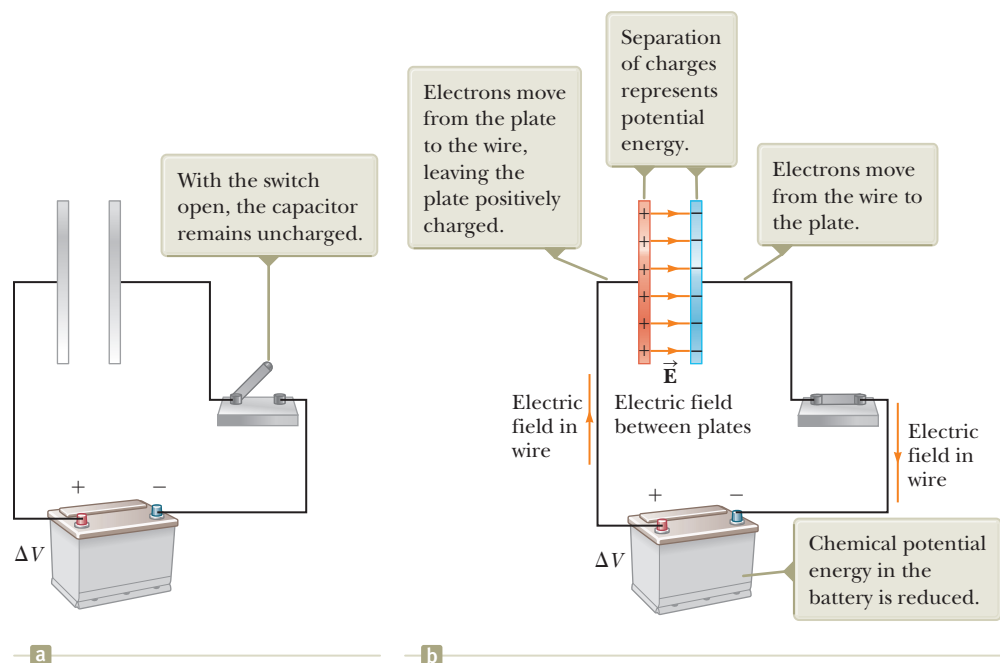


Figure 26.10 (a) A circuit consisting of a capacitor, a battery, and a switch. (b) When the switch is closed, the battery establishes an electric field in the wire and the capacitor becomes charged.

flow between the wires and the capacitor. As that occurs, there is a transformation of energy within the system. Before the switch is closed, energy is stored as chemical potential energy in the battery. This energy is transformed during the chemical reaction that occurs within the battery when it is operating in an electric circuit. When the switch is closed, some of the chemical potential energy in the battery is transformed to electric potential energy associated with the separation of positive and negative charges on the plates.

To calculate the energy stored in the capacitor, we shall assume a charging process that is different from the actual process described in Section 26.1 but that gives the same final result. This assumption is justified because the energy in the final configuration does not depend on the actual charge-transfer process.³ Imagine the plates are disconnected from the battery and you transfer the charge mechanically through the space between the plates as follows. You grab a small amount of positive charge on one plate and apply a force that causes this positive charge to move over to the other plate. Therefore, you do work on the charge as it is transferred from one plate to the other. At first, no work is required to transfer a small amount of charge dq from one plate to the other,⁴ but once this charge has been transferred, a small potential difference exists between the plates. Therefore, work must be done to move additional charge through this potential difference. As more and more charge is transferred from one plate to the other, the potential difference increases in proportion and more work is required. The overall process is described by the nonisolated system model for energy. Equation 8.2 reduces to $W = \Delta U_E$; the work done on the system by the external agent appears as an increase in electric potential energy in the system.

Suppose q is the charge on the capacitor at some instant during the charging process. At the same instant, the potential difference across the capacitor is $\Delta V = q/C$. This relationship is graphed in Figure 26.11. From Section 25.1, we know that the work necessary to transfer an increment of charge dq from the plate carrying charge $-q$ to the plate carrying charge q (which is at the higher electric potential) is

$$dW = \Delta V dq = \frac{q}{C} dq$$

The work required to transfer the charge dq is the area of the tan rectangle in Figure 26.11. Because $1 \text{ V} = 1 \text{ J/C}$, the unit for the area is the joule. The total work required to charge the capacitor from $q = 0$ to some final charge $q = Q$ is

$$W = \int_0^Q \frac{q}{C} dq = \frac{1}{C} \int_0^Q q dq = \frac{Q^2}{2C}$$

The work done in charging the capacitor appears as electric potential energy U_E stored in the capacitor. Using Equation 26.1, we can express the potential energy stored in a charged capacitor as

$$U_E = \frac{Q^2}{2C} = \frac{1}{2}Q\Delta V = \frac{1}{2}C(\Delta V)^2 \quad (26.11)$$

Because the curve in Figure 26.11 is a straight line, the total area under the curve is that of a triangle of base Q and height ΔV .

Equation 26.11 applies to any capacitor, regardless of its geometry. For a given capacitance, the stored energy increases as the charge and the potential difference increase. In practice, there is a limit to the maximum energy (or charge) that can be stored because, at a sufficiently large value of ΔV , discharge ultimately occurs

The work required to move charge dq through the potential difference ΔV across the capacitor plates is given approximately by the area of the shaded rectangle.

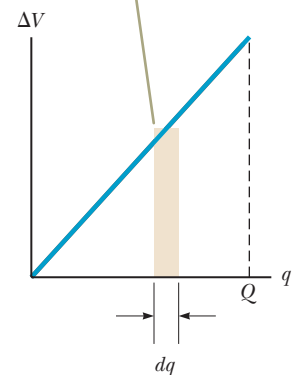


Figure 26.11 A plot of potential difference versus charge for a capacitor is a straight line having slope $1/C$.

◀ **Energy stored in a charged capacitor**

³This discussion is similar to that of state variables in thermodynamics. The change in a state variable such as temperature is independent of the path followed between the initial and final states. The potential energy of a capacitor (or any system) is also a state variable, so its change does not depend on the process followed to charge the capacitor.

⁴We shall use lowercase q for the time-varying charge on the capacitor while it is charging to distinguish it from uppercase Q , which is the total charge on the capacitor after it is completely charged.

Pitfall Prevention 26.4**Not a New Kind of Energy**

The energy given by Equation 26.12 is not a new kind of energy. The equation describes familiar electric potential energy associated with a system of separated source charges. Equation 26.12 provides a new *interpretation*, or a new way of *modeling* the energy. Furthermore, Equation 26.13 correctly describes the energy density associated with *any* electric field, regardless of the source.

**Energy density in
an electric field** ▶

between the plates. For this reason, capacitors are usually labeled with a maximum operating voltage.

We can consider the energy in a capacitor to be stored in the electric field created between the plates as the capacitor is charged. This description is reasonable because the electric field is proportional to the charge on the capacitor. For a parallel-plate capacitor, the potential difference is related to the electric field through the relationship $\Delta V = Ed$. Furthermore, its capacitance is $C = \epsilon_0 A/d$ (Eq. 26.3). Substituting these expressions into Equation 26.11 gives

$$U_E = \frac{1}{2} \left(\frac{\epsilon_0 A}{d} \right) (Ed)^2 = \frac{1}{2} (\epsilon_0 A d) E^2 \quad (26.12)$$

Because the volume occupied by the electric field is Ad , the *energy per unit volume* $u_E = U_E/Ad$, known as the *energy density*, is

$$u_E = \frac{1}{2} \epsilon_0 E^2 \quad (26.13)$$

Although Equation 26.13 was derived for a parallel-plate capacitor, the expression is generally valid regardless of the source of the electric field. That is, the energy density in any electric field is proportional to the square of the magnitude of the electric field at a given point.

Quick Quiz 26.4 You have three capacitors and a battery. In which of the following combinations of the three capacitors is the maximum possible energy stored when the combination is attached to the battery? (a) series (b) parallel (c) no difference because both combinations store the same amount of energy

Example 26.4 Rewiring Two Charged Capacitors

Two capacitors C_1 and C_2 (where $C_1 > C_2$) are charged to the same initial potential difference ΔV_i . The charged capacitors are removed from the battery, and their plates are connected with opposite polarity as in Figure 26.12a. The switches S_1 and S_2 are then closed as in Figure 26.12b.

(A) Find the final potential difference ΔV_f between a and b after the switches are closed.

SOLUTION

Conceptualize Figure 26.12 helps us understand the initial and final configurations of the system. When the switches are closed, the charge on the system will redistribute between the capacitors until both capacitors have the same potential difference. Because $C_1 > C_2$, more charge exists on C_1 than on C_2 , so the final configuration will have positive charge on the left plates as shown in Figure 26.12b.

Categorize In Figure 26.12b, it might appear as if the capacitors are connected in parallel, but there is no battery in this circuit to apply a voltage across the combination. Therefore, we *cannot* categorize this problem as one in which capacitors are connected in parallel. We *can* categorize it as a problem involving an isolated system for electric charge. The left-hand plates of the capacitors form an isolated system because they are not connected to the right-hand plates by conductors.

Analyze Write an expression for the total charge on the left-hand plates of the system before the switches are closed, noting that a negative sign for Q_{2i} is necessary because the charge on the left plate of capacitor C_2 is negative:

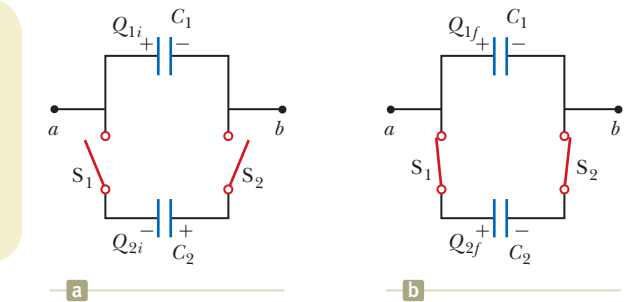


Figure 26.12 (Example 26.4) (a) Two capacitors are charged to the same initial potential difference and connected together with plates of opposite sign to be in contact when the switches are closed. (b) When the switches are closed, the charges redistribute.

(1) $Q_i = Q_{1i} + Q_{2i} = C_1 \Delta V_i - C_2 \Delta V_i = (C_1 - C_2) \Delta V_i$

► 26.4 continued

After the switches are closed, the charges on the individual capacitors change to new values Q_{1f} and Q_{2f} such that the potential difference is again the same across both capacitors, with a value of ΔV_f . Write an expression for the total charge on the left-hand plates of the system after the switches are closed:

$$(2) \quad Q_f = Q_{1f} + Q_{2f} = C_1 \Delta V_f + C_2 \Delta V_f = (C_1 + C_2) \Delta V_f$$

Because the system is isolated, the initial and final charges on the system must be the same. Use this condition and Equations (1) and (2) to solve for ΔV_f :

$$Q_f = Q_i \rightarrow (C_1 + C_2) \Delta V_f = (C_1 - C_2) \Delta V_i$$

$$(3) \quad \Delta V_f = \left(\frac{C_1 - C_2}{C_1 + C_2} \right) \Delta V_i$$

(B) Find the total energy stored in the capacitors before and after the switches are closed and determine the ratio of the final energy to the initial energy.

SOLUTION

Use Equation 26.11 to find an expression for the total energy stored in the capacitors before the switches are closed:

$$(4) \quad U_i = \frac{1}{2} C_1 (\Delta V_i)^2 + \frac{1}{2} C_2 (\Delta V_i)^2 = \frac{1}{2} (C_1 + C_2) (\Delta V_i)^2$$

Write an expression for the total energy stored in the capacitors after the switches are closed:

$$U_f = \frac{1}{2} C_1 (\Delta V_f)^2 + \frac{1}{2} C_2 (\Delta V_f)^2 = \frac{1}{2} (C_1 + C_2) (\Delta V_f)^2$$

Use the results of part (A) to rewrite this expression in terms of ΔV_i :

$$(5) \quad U_f = \frac{1}{2} (C_1 + C_2) \left[\left(\frac{C_1 - C_2}{C_1 + C_2} \right) \Delta V_i \right]^2 = \frac{1}{2} \frac{(C_1 - C_2)^2 (\Delta V_i)^2}{C_1 + C_2}$$

Divide Equation (5) by Equation (4) to obtain the ratio of the energies stored in the system:

$$\frac{U_f}{U_i} = \frac{\frac{1}{2} (C_1 - C_2)^2 (\Delta V_i)^2 / (C_1 + C_2)}{\frac{1}{2} (C_1 + C_2) (\Delta V_i)^2}$$

$$(6) \quad \frac{U_f}{U_i} = \left(\frac{C_1 - C_2}{C_1 + C_2} \right)^2$$

Finalize The ratio of energies is *less* than unity, indicating that the final energy is *less* than the initial energy. At first, you might think the law of energy conservation has been violated, but that is not the case. The “missing” energy is transferred out of the system by the mechanism of electromagnetic waves (T_{ER} in Eq. 8.2), as we shall see in Chapter 34. Therefore, this system is isolated for electric charge, but nonisolated for energy.

WHAT IF? What if the two capacitors have the same capacitance? What would you expect to happen when the switches are closed?

Answer Because both capacitors have the same initial potential difference applied to them, the charges on the identical capacitors have the same magnitude. When the capacitors with opposite polarities are connected together, the equal-magnitude charges should cancel each other, leaving the capacitors uncharged.

Let's test our results to see if that is the case mathematically. In Equation (1), because the capacitances are equal, the initial charge Q_i on the system of left-hand plates is zero. Equation (3) shows that $\Delta V_f = 0$, which is consistent with uncharged capacitors. Finally, Equation (5) shows that $U_f = 0$, which is also consistent with uncharged capacitors.

One device in which capacitors have an important role is the portable *defibrillator* (see the chapter-opening photo on page 777). When cardiac fibrillation (random contractions) occurs, the heart produces a rapid, irregular pattern of beats. A fast discharge of energy through the heart can return the organ to its normal beat pattern. Emergency medical teams use portable defibrillators that contain batteries capable of charging a capacitor to a high voltage. (The circuitry actually permits the capacitor to be charged to a much higher voltage than that of the battery.) Up to 360 J is stored

in the electric field of a large capacitor in a defibrillator when it is fully charged. The stored energy is released through the heart by conducting electrodes, called paddles, which are placed on both sides of the victim's chest. The defibrillator can deliver the energy to a patient in about 2 ms (roughly equivalent to 3 000 times the power delivered to a 60-W lightbulb!). The paramedics must wait between applications of the energy because of the time interval necessary for the capacitors to become fully charged. In this application and others (e.g., camera flash units and lasers used for fusion experiments), capacitors serve as energy reservoirs that can be slowly charged and then quickly discharged to provide large amounts of energy in a short pulse.

26.5 Capacitors with Dielectrics

Pitfall Prevention 26.5

Is the Capacitor Connected to a Battery?

For problems in which a capacitor is modified (by insertion of a dielectric, for example), you must note whether modifications to the capacitor are being made while the capacitor is connected to a battery or after it is disconnected. If the capacitor remains connected to the battery, the voltage across the capacitor necessarily remains the same. If you disconnect the capacitor from the battery before making any modifications to the capacitor, the capacitor is an isolated system for electric charge and its charge remains the same.

A **dielectric** is a nonconducting material such as rubber, glass, or waxed paper. We can perform the following experiment to illustrate the effect of a dielectric in a capacitor. Consider a parallel-plate capacitor that without a dielectric has a charge Q_0 and a capacitance C_0 . The potential difference across the capacitor is $\Delta V_0 = Q_0/C_0$. Figure 26.13a illustrates this situation. The potential difference is measured by a device called a *voltmeter*. Notice that no battery is shown in the figure; also, we must assume no charge can flow through an ideal voltmeter. Hence, there is no path by which charge can flow and alter the charge on the capacitor. If a dielectric is now inserted between the plates as in Figure 26.13b, the voltmeter indicates that the voltage between the plates decreases to a value ΔV . The voltages with and without the dielectric are related by a factor κ as follows:

$$\Delta V = \frac{\Delta V_0}{\kappa}$$

Because $\Delta V < \Delta V_0$, we see that $\kappa > 1$. The dimensionless factor κ is called the **dielectric constant** of the material. The dielectric constant varies from one material to another. In this section, we analyze this change in capacitance in terms of electrical parameters such as electric charge, electric field, and potential difference; Section 26.7 describes the microscopic origin of these changes.

Because the charge Q_0 on the capacitor does not change, the capacitance must change to the value

$$C = \frac{Q_0}{\Delta V} = \frac{Q_0}{\Delta V_0/\kappa} = \kappa \frac{Q_0}{\Delta V_0}$$

$$C = \kappa C_0$$

(26.14)

Capacitance of a capacitor filled with a material of dielectric constant κ

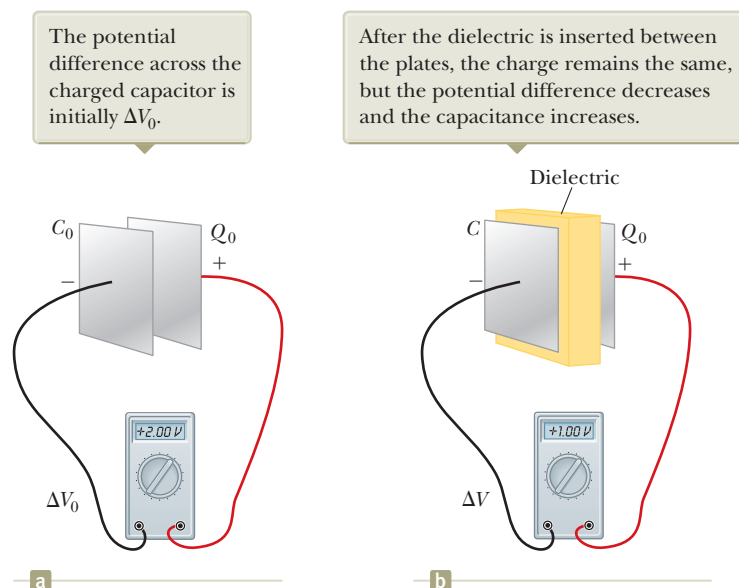


Figure 26.13 A charged capacitor (a) before and (b) after insertion of a dielectric between the plates.

That is, the capacitance *increases* by the factor κ when the dielectric completely fills the region between the plates.⁵ Because $C_0 = \epsilon_0 A/d$ (Eq. 26.3) for a parallel-plate capacitor, we can express the capacitance of a parallel-plate capacitor filled with a dielectric as

$$C = \kappa \frac{\epsilon_0 A}{d} \quad (26.15)$$

From Equation 26.15, it would appear that the capacitance could be made very large by inserting a dielectric between the plates and decreasing d . In practice, the lowest value of d is limited by the electric discharge that could occur through the dielectric medium separating the plates. For any given separation d , the maximum voltage that can be applied to a capacitor without causing a discharge depends on the **dielectric strength** (maximum electric field) of the dielectric. If the magnitude of the electric field in the dielectric exceeds the dielectric strength, the insulating properties break down and the dielectric begins to conduct.

Physical capacitors have a specification called by a variety of names, including *working voltage*, *breakdown voltage*, and *rated voltage*. This parameter represents the largest voltage that can be applied to the capacitor without exceeding the dielectric strength of the dielectric material in the capacitor. Consequently, when selecting a capacitor for a given application, you must consider its capacitance as well as the expected voltage across the capacitor in the circuit, making sure the expected voltage is smaller than the rated voltage of the capacitor.

Insulating materials have values of κ greater than unity and dielectric strengths greater than that of air as Table 26.1 indicates. Therefore, a dielectric provides the following advantages:

- An increase in capacitance
- An increase in maximum operating voltage
- Possible mechanical support between the plates, which allows the plates to be close together without touching, thereby decreasing d and increasing C

Table 26.1 Approximate Dielectric Constants and Dielectric Strengths of Various Materials at Room Temperature

Material	Dielectric Constant κ	Dielectric Strength ^a (10^6 V/m)
Air (dry)	1.000 59	3
Bakelite	4.9	24
Fused quartz	3.78	8
Mylar	3.2	7
Neoprene rubber	6.7	12
Nylon	3.4	14
Paper	3.7	16
Paraffin-impregnated paper	3.5	11
Polystyrene	2.56	24
Polyvinyl chloride	3.4	40
Porcelain	6	12
Pyrex glass	5.6	14
Silicone oil	2.5	15
Strontium titanate	233	8
Teflon	2.1	60
Vacuum	1.000 00	—
Water	80	—

^aThe dielectric strength equals the maximum electric field that can exist in a dielectric without electrical breakdown. These values depend strongly on the presence of impurities and flaws in the materials.

⁵ If the dielectric is introduced while the potential difference is held constant by a battery, the charge increases to a value $Q = \kappa Q_0$. The additional charge comes from the wires attached to the capacitor, and the capacitance again increases by the factor κ .

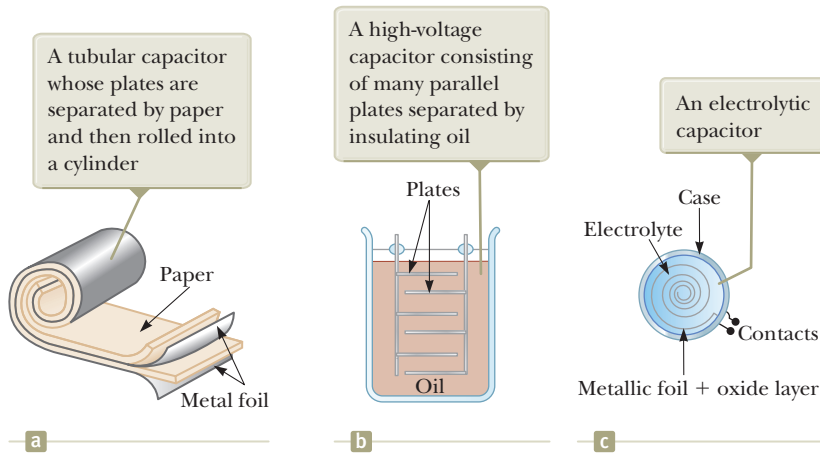


Figure 26.14 Three commercial capacitor designs.




Figure 26.15 A variable capacitor.

Types of Capacitors

Many capacitors are built into integrated circuit chips, but some electrical devices still use stand-alone capacitors. Commercial capacitors are often made from metallic foil interlaced with thin sheets of either paraffin-impregnated paper or Mylar as the dielectric material. These alternate layers of metallic foil and dielectric are rolled into a cylinder to form a small package (Fig. 26.14a). High-voltage capacitors commonly consist of a number of interwoven metallic plates immersed in silicone oil (Fig. 26.14b). Small capacitors are often constructed from ceramic materials.

Often, an *electrolytic capacitor* is used to store large amounts of charge at relatively low voltages. This device, shown in Figure 26.14c, consists of a metallic foil in contact with an *electrolyte*, a solution that conducts electricity by virtue of the motion of ions contained in the solution. When a voltage is applied between the foil and the electrolyte, a thin layer of metal oxide (an insulator) is formed on the foil, and this layer serves as the dielectric. Very large values of capacitance can be obtained in an electrolytic capacitor because the dielectric layer is very thin and therefore the plate separation is very small.

Electrolytic capacitors are not reversible as are many other capacitors. They have a polarity, which is indicated by positive and negative signs marked on the device. When electrolytic capacitors are used in circuits, the polarity must be correct. If the polarity of the applied voltage is the opposite of what is intended, the oxide layer is removed and the capacitor conducts electricity instead of storing charge.

Variable capacitors (typically 10 to 500 pF) usually consist of two interwoven sets of metallic plates, one fixed and the other movable, and contain air as the dielectric (Fig. 26.15). These types of capacitors are often used in radio tuning circuits.

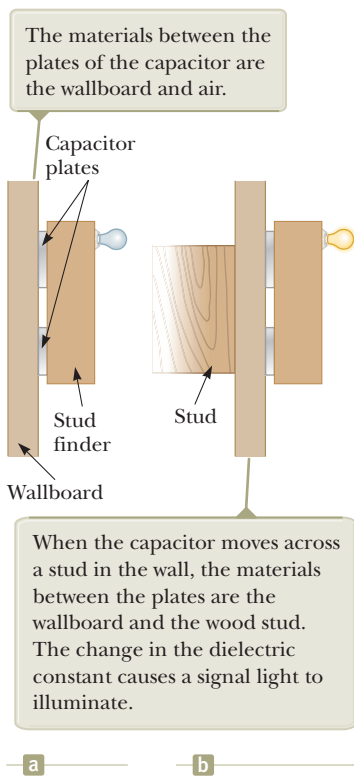


Figure 26.16 (Quick Quiz 26.5) A stud finder.

Quick Quiz 26.5 If you have ever tried to hang a picture or a mirror, you know it can be difficult to locate a wooden stud in which to anchor your nail or screw. A carpenter's stud finder is a capacitor with its plates arranged side by side instead of facing each other as shown in Figure 26.16. When the device is moved over a stud, does the capacitance (a) increase or (b) decrease?

Example 26.5 Energy Stored Before and After AM

A parallel-plate capacitor is charged with a battery to a charge Q_0 . The battery is then removed, and a slab of material that has a dielectric constant κ is inserted between the plates. Identify the system as the capacitor and the dielectric. Find the energy stored in the system before and after the dielectric is inserted.

26.5 continued

SOLUTION

Conceptualize Think about what happens when the dielectric is inserted between the plates. Because the battery has been removed, the charge on the capacitor must remain the same. We know from our earlier discussion, however, that the capacitance must change. Therefore, we expect a change in the energy of the system.

Categorize Because we expect the energy of the system to change, we model it as a *nonisolated system* for energy involving a capacitor and a dielectric.

Analyze From Equation 26.11, find the energy stored in the absence of the dielectric:

$$U_0 = \frac{Q_0^2}{2C_0}$$

Find the energy stored in the capacitor after the dielectric is inserted between the plates:

$$U = \frac{Q_0^2}{2C}$$

Use Equation 26.14 to replace the capacitance C :

$$U = \frac{Q_0^2}{2\kappa C_0} = \frac{U_0}{\kappa}$$

Finalize Because $\kappa > 1$, the final energy is less than the initial energy. We can account for the decrease in energy of the system by performing an experiment and noting that the dielectric, when inserted, is pulled into the device. To keep the dielectric from accelerating, an external agent must do negative work on the dielectric. Equation 8.2 becomes $\Delta U = W$, where both sides of the equation are negative.

26.6 Electric Dipole in an Electric Field

We have discussed the effect on the capacitance of placing a dielectric between the plates of a capacitor. In Section 26.7, we shall describe the microscopic origin of this effect. Before we can do so, however, let's expand the discussion of the electric dipole introduced in Section 23.4 (see Example 23.6). The electric dipole consists of two charges of equal magnitude and opposite sign separated by a distance $2a$ as shown in Figure 26.17. The **electric dipole moment** of this configuration is defined as the vector \vec{p} directed from $-q$ toward $+q$ along the line joining the charges and having magnitude

$$p = 2aq \quad (26.16)$$

Now suppose an electric dipole is placed in a uniform electric field \vec{E} and makes an angle θ with the field as shown in Figure 26.18. We identify \vec{E} as the field *external* to the dipole, established by some other charge distribution, to distinguish it from the field *due* to the dipole, which we discussed in Section 23.4.

Each of the charges is modeled as a particle in an electric field. The electric forces acting on the two charges are equal in magnitude ($F = qE$) and opposite in direction as shown in Figure 26.18. Therefore, the net force on the dipole is zero. The two forces produce a net torque on the dipole, however; the dipole is therefore described by the rigid object under a net torque model. As a result, the dipole rotates in the direction that brings the dipole moment vector into greater alignment with the field. The torque due to the force on the positive charge about an axis through O in Figure 26.18 has magnitude $Fa \sin \theta$, where $a \sin \theta$ is the moment arm of F about O . This force tends to produce a clockwise rotation. The torque about O on the negative charge is also of magnitude $Fa \sin \theta$; here again, the force tends to produce a clockwise rotation. Therefore, the magnitude of the net torque about O is

$$\tau = 2Fa \sin \theta$$

Because $F = qE$ and $p = 2aq$, we can express τ as

$$\tau = 2aqE \sin \theta = pE \sin \theta \quad (26.17)$$

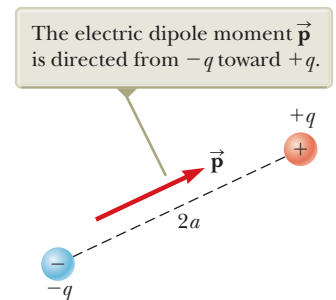


Figure 26.17 An electric dipole consists of two charges of equal magnitude and opposite sign separated by a distance of $2a$.

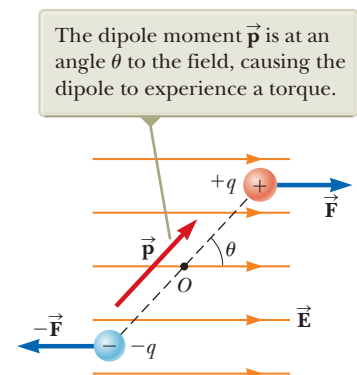


Figure 26.18 An electric dipole in a uniform external electric field.

Based on this expression, it is convenient to express the torque in vector form as the cross product of the vectors \vec{p} and \vec{E} :

$$\vec{\tau} = \vec{p} \times \vec{E} \quad (26.18)$$

Torque on an electric dipole in an external electric field

We can also model the system of the dipole and the external electric field as an isolated system for energy. Let's determine the potential energy of the system as a function of the dipole's orientation with respect to the field. To do so, recognize that work must be done by an external agent to rotate the dipole through an angle so as to cause the dipole moment vector to become less aligned with the field. The work done is then stored as electric potential energy in the system. Notice that this potential energy is associated with a *rotational* configuration of the system. Previously, we have seen potential energies associated with *translational* configurations: an object with mass was moved in a gravitational field, a charge was moved in an electric field, or a spring was extended. The work dW required to rotate the dipole through an angle $d\theta$ is $dW = \tau d\theta$ (see Eq. 10.25). Because $\tau = pE \sin \theta$ and the work results in an increase in the electric potential energy U , we find that for a rotation from θ_i to θ_f , the change in potential energy of the system is

$$\begin{aligned} U_f - U_i &= \int_{\theta_i}^{\theta_f} \tau d\theta = \int_{\theta_i}^{\theta_f} pE \sin \theta d\theta = pE \int_{\theta_i}^{\theta_f} \sin \theta d\theta \\ &= pE[-\cos \theta]_{\theta_i}^{\theta_f} = pE(\cos \theta_i - \cos \theta_f) \end{aligned}$$

The term that contains $\cos \theta_i$ is a constant that depends on the initial orientation of the dipole. It is convenient to choose a reference angle of $\theta_i = 90^\circ$ so that $\cos \theta_i = \cos 90^\circ = 0$. Furthermore, let's choose $U_i = 0$ at $\theta_i = 90^\circ$ as our reference value of potential energy. Hence, we can express a general value of $U_E = U_f$ as

$$U_E = -pE \cos \theta \quad (26.19)$$

We can write this expression for the potential energy of a dipole in an electric field as the dot product of the vectors \vec{p} and \vec{E} :

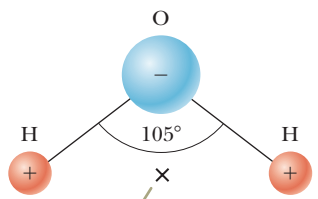
$$U_E = -\vec{p} \cdot \vec{E} \quad (26.20)$$

Potential energy of the system of an electric dipole in an external electric field

To develop a conceptual understanding of Equation 26.19, compare it with the expression for the potential energy of the system of an object in the Earth's gravitational field, $U_g = mgy$ (Eq. 7.19). First, both expressions contain a parameter of the entity placed in the field: mass for the object, dipole moment for the dipole. Second, both expressions contain the field, g for the object, E for the dipole. Finally, both expressions contain a configuration description: translational position y for the object, rotational position θ for the dipole. In both cases, once the configuration is changed, the system tends to return to the original configuration when the object is released: the object of mass m falls toward the ground, and the dipole begins to rotate back toward the configuration in which it is aligned with the field.

Molecules are said to be *polarized* when a separation exists between the average position of the negative charges and the average position of the positive charges in the molecule. In some molecules such as water, this condition is always present; such molecules are called **polar molecules**. Molecules that do not possess a permanent polarization are called **nonpolar molecules**.

We can understand the permanent polarization of water by inspecting the geometry of the water molecule. The oxygen atom in the water molecule is bonded to the hydrogen atoms such that an angle of 105° is formed between the two bonds (Fig. 26.19). The oxygen atom in the water molecule is bonded to the hydrogen atoms such that an angle of 105° is formed between the two bonds (Fig. 26.19). The center of the negative charge distribution is near the oxygen atom, and the center of the positive charge distribution lies at a point midway along the line joining the hydrogen atoms (the point labeled \times in Fig. 26.19). We can model the water molecule and other polar molecules as dipoles because the average positions of the positive and negative charges act as point charges. As a result, we can apply our discussion of dipoles to the behavior of polar molecules.



The center of the positive charge distribution is at the point \times .

Figure 26.19 The water molecule, H_2O , has a permanent polarization resulting from its nonlinear geometry.

Washing with soap and water is a household scenario in which the dipole structure of water is exploited. Grease and oil are made up of nonpolar molecules, which are generally not attracted to water. Plain water is not very useful for removing this type of grime. Soap contains long molecules called *surfactants*. In a long molecule, the polarity characteristics of one end of the molecule can be different from those at the other end. In a surfactant molecule, one end acts like a nonpolar molecule and the other acts like a polar molecule. The nonpolar end can attach to a grease or oil molecule, and the polar end can attach to a water molecule. Therefore, the soap serves as a chain, linking the dirt and water molecules together. When the water is rinsed away, the grease and oil go with it.

A symmetric molecule (Fig. 26.20a) has no permanent polarization, but polarization can be induced by placing the molecule in an electric field. A field directed to the left as in Figure 26.20b causes the center of the negative charge distribution to shift to the right relative to the positive charges. This *induced polarization* is the effect that predominates in most materials used as dielectrics in capacitors.

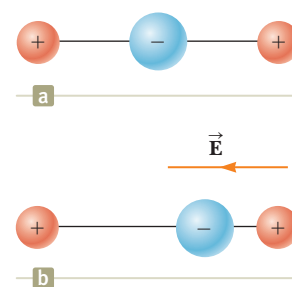


Figure 26.20 (a) A linear symmetric molecule has no permanent polarization. (b) An external electric field induces a polarization in the molecule.

Example 26.6 The H₂O Molecule AM

The water (H₂O) molecule has an electric dipole moment of $6.3 \times 10^{-30} \text{ C} \cdot \text{m}$. A sample contains 10^{21} water molecules, with the dipole moments all oriented in the direction of an electric field of magnitude $2.5 \times 10^5 \text{ N/C}$. How much work is required to rotate the dipoles from this orientation ($\theta = 0^\circ$) to one in which all the moments are perpendicular to the field ($\theta = 90^\circ$)?

SOLUTION

Conceptualize When all the dipoles are aligned with the electric field, the dipoles–electric field system has the minimum potential energy. This energy has a negative value given by the product of the right side of Equation 26.19, evaluated at 0° , and the number N of dipoles.

Categorize The combination of the dipoles and the electric field is identified as a system. We use the *nonisolated system* model because an external agent performs work on the system to change its potential energy.

Analyze Write the appropriate reduction of the conservation of energy equation, Equation 8.2, for this situation:

$$(1) \quad \Delta U_E = W$$

Use Equation 26.19 to evaluate the initial and final potential energies of the system and Equation (1) to calculate the work required to rotate the dipoles:

$$\begin{aligned} W &= U_{90^\circ} - U_{0^\circ} = (-NpE \cos 90^\circ) - (-NpE \cos 0^\circ) \\ &= NpE = (10^{21})(6.3 \times 10^{-30} \text{ C} \cdot \text{m})(2.5 \times 10^5 \text{ N/C}) \\ &= 1.6 \times 10^{-3} \text{ J} \end{aligned}$$

Finalize Notice that the work done on the system is positive because the potential energy of the system has been raised from a negative value to a value of zero.

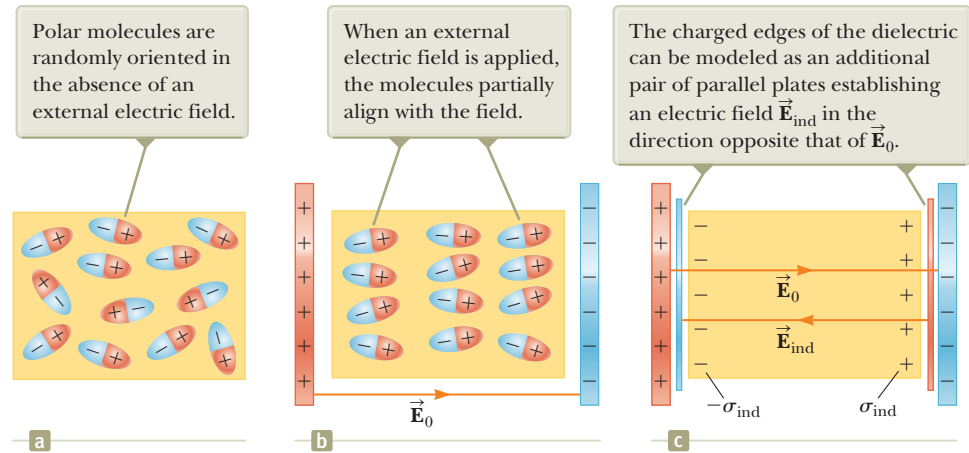
26.7 An Atomic Description of Dielectrics

In Section 26.5, we found that the potential difference ΔV_0 between the plates of a capacitor is reduced to $\Delta V_0/\kappa$ when a dielectric is introduced. The potential difference is reduced because the magnitude of the electric field decreases between the plates. In particular, if \vec{E}_0 is the electric field without the dielectric, the field in the presence of a dielectric is

$$\vec{E} = \frac{\vec{E}_0}{\kappa} \quad (26.21)$$

First consider a dielectric made up of polar molecules placed in the electric field between the plates of a capacitor. The dipoles (that is, the polar molecules making

Figure 26.21 (a) Polar molecules in a dielectric. (b) An electric field is applied to the dielectric. (c) Details of the electric field inside the dielectric.



up the dielectric) are randomly oriented in the absence of an electric field as shown in Figure 26.21a. When an external field \vec{E}_0 due to charges on the capacitor plates is applied, a torque is exerted on the dipoles, causing them to partially align with the field as shown in Figure 26.21b. The dielectric is now polarized. The degree of alignment of the molecules with the electric field depends on temperature and the magnitude of the field. In general, the alignment increases with decreasing temperature and with increasing electric field.

If the molecules of the dielectric are nonpolar, the electric field due to the plates produces an induced polarization in the molecule. These induced dipole moments tend to align with the external field, and the dielectric is polarized. Therefore, a dielectric can be polarized by an external field regardless of whether the molecules in the dielectric are polar or nonpolar.

With these ideas in mind, consider a slab of dielectric material placed between the plates of a capacitor so that it is in a uniform electric field \vec{E}_0 as shown in Figure 26.21b. The electric field due to the plates is directed to the right and polarizes the dielectric. The net effect on the dielectric is the formation of an *induced* positive surface charge density σ_{ind} on the right face and an equal-magnitude negative surface charge density $-\sigma_{\text{ind}}$ on the left face as shown in Figure 26.21c. Because we can model these surface charge distributions as being due to charged parallel plates, the induced surface charges on the dielectric give rise to an induced electric field \vec{E}_{ind} in the direction opposite the external field \vec{E}_0 . Therefore, the net electric field \vec{E} in the dielectric has a magnitude

$$E = E_0 - E_{\text{ind}} \quad (26.22)$$

In the parallel-plate capacitor shown in Figure 26.22, the external field E_0 is related to the charge density σ on the plates through the relationship $E_0 = \sigma/\epsilon_0$. The induced electric field in the dielectric is related to the induced charge density σ_{ind} through the relationship $E_{\text{ind}} = \sigma_{\text{ind}}/\epsilon_0$. Because $E = E_0/\kappa = \sigma/\kappa\epsilon_0$, substitution into Equation 26.22 gives

$$\begin{aligned} \frac{\sigma}{\kappa\epsilon_0} &= \frac{\sigma}{\epsilon_0} - \frac{\sigma_{\text{ind}}}{\epsilon_0} \\ \sigma_{\text{ind}} &= \left(\frac{\kappa - 1}{\kappa}\right)\sigma \end{aligned} \quad (26.23)$$

Because $\kappa > 1$, this expression shows that the charge density σ_{ind} induced on the dielectric is less than the charge density σ on the plates. For instance, if $\kappa = 3$, the induced charge density is two-thirds the charge density on the plates. If no dielectric is present, then $\kappa = 1$ and $\sigma_{\text{ind}} = 0$ as expected. If the dielectric is replaced by an electrical conductor for which $E = 0$, however, Equation 26.22 indicates that $E_0 = E_{\text{ind}}$, which corresponds to $\sigma_{\text{ind}} = \sigma$. That is, the surface charge induced on

The induced charge density σ_{ind} on the dielectric is *less* than the charge density σ on the plates.

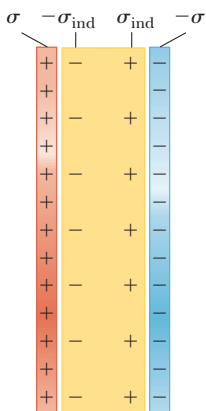


Figure 26.22 Induced charge on a dielectric placed between the plates of a charged capacitor.

the conductor is equal in magnitude but opposite in sign to that on the plates, resulting in a net electric field of zero in the conductor (see Fig. 24.16).

Example 26.7 Effect of a Metallic Slab

A parallel-plate capacitor has a plate separation d and plate area A . An uncharged metallic slab of thickness a is inserted midway between the plates.

(A) Find the capacitance of the device.

SOLUTION

Conceptualize Figure 26.23a shows the metallic slab between the plates of the capacitor. Any charge that appears on one plate of the capacitor must induce a charge of equal magnitude and opposite sign on the near side of the slab as shown in Figure 26.23a. Consequently, the net charge on the slab remains zero and the electric field inside the slab is zero.

Categorize The planes of charge on the metallic slab's upper and lower edges are identical to the distribution of charges on the plates of a capacitor. The metal between the slab's edges serves only to make an electrical connection between the edges. Therefore, we can model the edges of the slab as conducting planes and the bulk of the slab as a wire.

As a result, the capacitor in Figure 26.23a is equivalent to two capacitors in series, each having a plate separation $(d - a)/2$ as shown in Figure 26.23b.

Analyze Use Equation 26.3 and the rule for adding two capacitors in series (Eq. 26.10) to find the equivalent capacitance in Figure 26.23b:

$$\frac{1}{C} = \frac{1}{C_1} + \frac{1}{C_2} = \frac{1}{\frac{\epsilon_0 A}{(d-a)/2}} + \frac{1}{\frac{\epsilon_0 A}{(d-a)/2}}$$

$$C = \frac{\epsilon_0 A}{d-a}$$

(B) Show that the capacitance of the original capacitor is unaffected by the insertion of the metallic slab if the slab is infinitesimally thin.

SOLUTION

In the result for part (A), let $a \rightarrow 0$:

$$C = \lim_{a \rightarrow 0} \left(\frac{\epsilon_0 A}{d-a} \right) = \frac{\epsilon_0 A}{d}$$

Finalize The result of part (B) is the original capacitance before the slab is inserted, which tells us that we can insert an infinitesimally thin metallic sheet between the plates of a capacitor without affecting the capacitance. We use this fact in the next example.

WHAT IF? What if the metallic slab in part (A) is not midway between the plates? How would that affect the capacitance?

Answer Let's imagine moving the slab in Figure 26.23a upward so that the distance between the upper edge of the slab and the upper plate is b . Then, the distance between the lower edge of the slab and the lower plate is $d - b - a$. As in part (A), we find the total capacitance of the series combination:

$$\frac{1}{C} = \frac{1}{C_1} + \frac{1}{C_2} = \frac{1}{\epsilon_0 A / b} + \frac{1}{\epsilon_0 A / (d-b-a)}$$

$$= \frac{b}{\epsilon_0 A} + \frac{d-b-a}{\epsilon_0 A} = \frac{d-a}{\epsilon_0 A} \rightarrow C = \frac{\epsilon_0 A}{d-a}$$

which is the same result as found in part (A). The capacitance is independent of the value of b , so it does not matter where the slab is located. In Figure 26.23b, when the central structure is moved up or down, the decrease in plate separation of one capacitor is compensated by the increase in plate separation for the other.

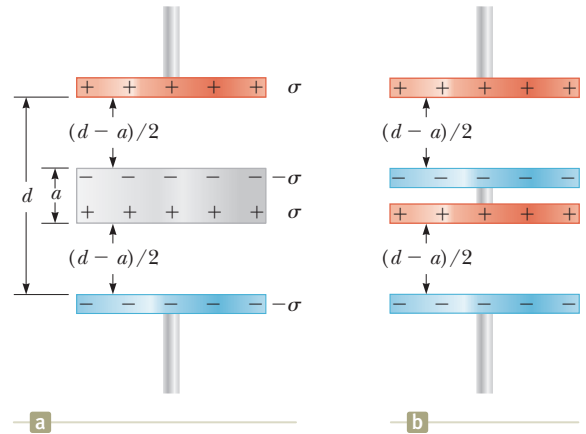


Figure 26.23 (Example 26.7) (a) A parallel-plate capacitor of plate separation d partially filled with a metallic slab of thickness a . (b) The equivalent circuit of the device in (a) consists of two capacitors in series, each having a plate separation $(d - a)/2$.

Example 26.8 A Partially Filled Capacitor

A parallel-plate capacitor with a plate separation d has a capacitance C_0 in the absence of a dielectric. What is the capacitance when a slab of dielectric material of dielectric constant κ and thickness fd is inserted between the plates (Fig. 26.24a), where f is a fraction between 0 and 1?

SOLUTION

Conceptualize In our previous discussions of dielectrics between the plates of a capacitor, the dielectric filled the volume between the plates. In this example, only part of the volume between the plates contains the dielectric material.

Categorize In Example 26.7, we found that an infinitesimally thin metallic sheet inserted between the plates of a capacitor does not affect the capacitance. Imagine sliding an infinitesimally thin metallic slab along the bottom face of the dielectric shown in Figure 26.24a. We can model this system as a series combination of two capacitors as shown in Figure 26.24b. One capacitor has a plate separation fd and is filled with a dielectric; the other has a plate separation $(1 - f)d$ and has air between its plates.

Analyze Evaluate the two capacitances in Figure 26.24b from Equation 26.15:

Find the equivalent capacitance C from Equation 26.10 for two capacitors combined in series:

Invert and substitute for the capacitance without the dielectric, $C_0 = \epsilon_0 A/d$:

Finalize Let's test this result for some known limits. If $f \rightarrow 0$, the dielectric should disappear. In this limit, $C \rightarrow C_0$, which is consistent with a capacitor with air between the plates. If $f \rightarrow 1$, the dielectric fills the volume between the plates. In this limit, $C \rightarrow \kappa C_0$, which is consistent with Equation 26.14.

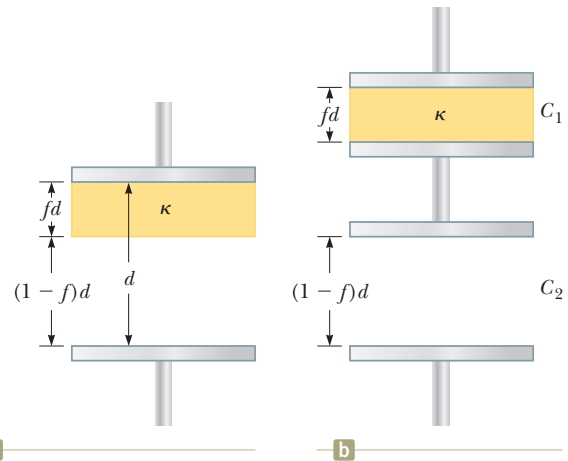


Figure 26.24 (Example 26.8) (a) A parallel-plate capacitor of plate separation d partially filled with a dielectric of thickness fd . (b) The equivalent circuit of the capacitor consists of two capacitors connected in series.

$$C_1 = \frac{\kappa \epsilon_0 A}{fd} \quad \text{and} \quad C_2 = \frac{\epsilon_0 A}{(1-f)d}$$

$$\frac{1}{C} = \frac{1}{C_1} + \frac{1}{C_2} = \frac{fd}{\kappa \epsilon_0 A} + \frac{(1-f)d}{\epsilon_0 A}$$

$$\frac{1}{C} = \frac{fd}{\kappa \epsilon_0 A} + \frac{\kappa(1-f)d}{\kappa \epsilon_0 A} = \frac{f + \kappa(1-f)}{\kappa} \frac{d}{\epsilon_0 A}$$

$$C = \frac{\kappa}{f + \kappa(1-f)} \frac{\epsilon_0 A}{d} = \frac{\kappa}{f + \kappa(1-f)} C_0$$

Summary

Definitions

A **capacitor** consists of two conductors carrying charges of equal magnitude and opposite sign. The **capacitance** C of any capacitor is the ratio of the charge Q on either conductor to the potential difference ΔV between them:

$$C \equiv \frac{Q}{\Delta V} \quad (26.1)$$

The capacitance depends only on the geometry of the conductors and not on an external source of charge or potential difference. The SI unit of capacitance is coulombs per volt, or the **farad** (F): $1 \text{ F} = 1 \text{ C/V}$.

The **electric dipole moment** \vec{p} of an electric dipole has a magnitude

$$p \equiv 2aq \quad (26.16)$$

where $2a$ is the distance between the charges q and $-q$. The direction of the electric dipole moment vector is from the negative charge toward the positive charge.

Concepts and Principles

If two or more capacitors are connected in parallel, the potential difference is the same across all capacitors. The equivalent capacitance of a **parallel combination** of capacitors is

$$C_{\text{eq}} = C_1 + C_2 + C_3 + \cdots \quad (26.8)$$

If two or more capacitors are connected in series, the charge is the same on all capacitors, and the equivalent capacitance of the **series combination** is given by

$$\frac{1}{C_{\text{eq}}} = \frac{1}{C_1} + \frac{1}{C_2} + \frac{1}{C_3} + \cdots \quad (26.10)$$

These two equations enable you to simplify many electric circuits by replacing multiple capacitors with a single equivalent capacitance.

When a dielectric material is inserted between the plates of a capacitor, the capacitance increases by a dimensionless factor κ , called the **dielectric constant**:

$$C = \kappa C_0 \quad (26.14)$$

where C_0 is the capacitance in the absence of the dielectric.

Energy is stored in a charged capacitor because the charging process is equivalent to the transfer of charges from one conductor at a lower electric potential to another conductor at a higher potential. The energy stored in a capacitor of capacitance C with charge Q and potential difference ΔV is

$$U_E = \frac{Q^2}{2C} = \frac{1}{2}Q\Delta V = \frac{1}{2}C(\Delta V)^2 \quad (26.11)$$

The torque acting on an electric dipole in a uniform electric field \vec{E} is

$$\vec{\tau} = \vec{p} \times \vec{E} \quad (26.18)$$

The potential energy of the system of an electric dipole in a uniform external electric field \vec{E} is

$$U_E = -\vec{p} \cdot \vec{E} \quad (26.20)$$

Objective Questions

1. denotes answer available in *Student Solutions Manual/Study Guide*

- A fully charged parallel-plate capacitor remains connected to a battery while you slide a dielectric between the plates. Do the following quantities (a) increase, (b) decrease, or (c) stay the same? (i) C (ii) Q (iii) ΔV (iv) the energy stored in the capacitor
- By what factor is the capacitance of a metal sphere multiplied if its volume is tripled? (a) 3 (b) $3^{1/3}$ (c) 1 (d) $3^{-1/3}$ (e) $\frac{1}{3}$
- An electronics technician wishes to construct a parallel-plate capacitor using rutile ($\kappa = 100$) as the dielectric. The area of the plates is 1.00 cm^2 . What is the capacitance if the rutile thickness is 1.00 mm ? (a) 88.5 pF (b) 177 pF (c) $8.85 \mu\text{F}$ (d) $100 \mu\text{F}$ (e) $35.4 \mu\text{F}$
- A parallel-plate capacitor is connected to a battery. What happens to the stored energy if the plate separation is doubled while the capacitor remains connected to the battery? (a) It remains the same. (b) It is doubled. (c) It decreases by a factor of 2. (d) It decreases by a factor of 4. (e) It increases by a factor of 4.
- If three unequal capacitors, initially uncharged, are connected in series across a battery, which of the following statements is true? (a) The equivalent capacitance is greater than any of the individual capacitances. (b) The largest voltage appears across the smallest capacitance. (c) The largest voltage appears across the largest capacitance. (d) The capacitor with the largest capacitance has the greatest charge. (e) The capacitor with the smallest capacitance has the smallest charge.
- Assume a device is designed to obtain a large potential difference by first charging a bank of capacitors connected in parallel and then activating a switch arrangement that in effect disconnects the capacitors from the charging source and from each other and reconnects them all in a series arrangement. The group of charged capacitors is then discharged in series. What is the maximum potential difference that can be obtained in this manner by using ten $500\text{-}\mu\text{F}$ capacitors and an 800-V charging source? (a) 500 V (b) 8.00 kV (c) 400 kV (d) 800 V (e) 0
- (i) What happens to the magnitude of the charge on each plate of a capacitor if the potential difference between the conductors is doubled? (a) It becomes four times larger. (b) It becomes two times larger. (c) It is unchanged. (d) It becomes one-half as large. (e) It becomes one-fourth as large. (ii) If the potential difference across a capacitor is doubled, what happens to the energy stored? Choose from the same possibilities as in part (i).
- A capacitor with very large capacitance is in series with another capacitor with very small capacitance. What is the equivalent capacitance of the combination? (a) slightly greater than the capacitance of the large capacitor (b) slightly less than the capacitance of the large capacitor (c) slightly greater than the capacitance of the small capacitor (d) slightly less than the capacitance of the small capacitor

9. A parallel-plate capacitor filled with air carries a charge Q . The battery is disconnected, and a slab of material with dielectric constant $\kappa = 2$ is inserted between the plates. Which of the following statements is true? (a) The voltage across the capacitor decreases by a factor of 2. (b) The voltage across the capacitor is doubled. (c) The charge on the plates is doubled. (d) The charge on the plates decreases by a factor of 2. (e) The electric field is doubled.
10. (i) A battery is attached to several different capacitors connected in parallel. Which of the following statements is true? (a) All capacitors have the same charge, and the equivalent capacitance is greater than the capacitance of any of the capacitors in the group. (b) The capacitor with the largest capacitance carries the smallest charge. (c) The potential difference across each capacitor is the same, and the equivalent capacitance is greater than any of the capacitors in the group. (d) The capacitor with the smallest capacitance carries the largest charge. (e) The potential differences across the capacitors are the same only if the capacitances are the same. (ii) The capacitors are reconnected in series, and the combination is again connected to the battery. From the same choices, choose the one that is true.
11. A parallel-plate capacitor is charged and then is disconnected from the battery. By what factor does the stored energy change when the plate separation is then doubled? (a) It becomes four times larger. (b) It becomes two times larger. (c) It stays the same. (d) It becomes one-half as large. (e) It becomes one-fourth as large.
12. (i) Rank the following five capacitors from greatest to smallest capacitance, noting any cases of equality. (a) a $20\text{-}\mu\text{F}$ capacitor with a 4-V potential difference between its plates (b) a $30\text{-}\mu\text{F}$ capacitor with charges of magnitude $90\text{ }\mu\text{C}$ on each plate (c) a capacitor with charges of magnitude $80\text{ }\mu\text{C}$ on its plates, differing by 2 V in potential, (d) a $10\text{-}\mu\text{F}$ capacitor storing energy $125\text{ }\mu\text{J}$ (e) a capacitor storing energy $250\text{ }\mu\text{J}$ with a 10-V potential difference (ii) Rank the same capacitors in part (i) from largest to smallest according to the potential difference between the plates. (iii) Rank the capacitors in part (i) in the order of the magnitudes of the charges on their plates. (iv) Rank the capacitors in part (i) in the order of the energy they store.
13. True or False? (a) From the definition of capacitance $C = Q/\Delta V$, it follows that an uncharged capacitor has a capacitance of zero. (b) As described by the definition of capacitance, the potential difference across an uncharged capacitor is zero.
14. You charge a parallel-plate capacitor, remove it from the battery, and prevent the wires connected to the plates from touching each other. When you increase the plate separation, do the following quantities (a) increase, (b) decrease, or (c) stay the same? (i) C (ii) Q (iii) E between the plates (iv) ΔV

Conceptual Questions

1. denotes answer available in *Student Solutions Manual/Study Guide*

- (a) Why is it dangerous to touch the terminals of a high-voltage capacitor even after the voltage source that charged the capacitor is disconnected from the capacitor? (b) What can be done to make the capacitor safe to handle after the voltage source has been removed?
- Assume you want to increase the maximum operating voltage of a parallel-plate capacitor. Describe how you can do that with a fixed plate separation.
- 3.** If you were asked to design a capacitor in which small size and large capacitance were required, what would be the two most important factors in your design?
- Explain why a dielectric increases the maximum operating voltage of a capacitor even though the physical size of the capacitor doesn't change.
- Explain why the work needed to move a particle with charge Q through a potential difference ΔV is $W = Q\Delta V$, whereas the energy stored in a charged capacitor is $U_E = \frac{1}{2}Q\Delta V$. Where does the factor $\frac{1}{2}$ come from?
- An air-filled capacitor is charged, then disconnected from the power supply, and finally connected to a voltmeter. Explain how and why the potential difference changes when a dielectric is inserted between the plates of the capacitor.
- The sum of the charges on both plates of a capacitor is zero. What does a capacitor store?
- Because the charges on the plates of a parallel-plate capacitor are opposite in sign, they attract each other. Hence, it would take positive work to increase the plate separation. What type of energy in the system changes due to the external work done in this process?

Problems



The problems found in this chapter may be assigned online in Enhanced WebAssign

1. straightforward; 2. intermediate; 3. challenging

1. full solution available in the *Student Solutions Manual/Study Guide*



Analysis Model tutorial available in Enhanced WebAssign



Guided Problem



Master It tutorial available in Enhanced WebAssign



Watch It video solution available in Enhanced WebAssign

Section 26.1 Definition of Capacitance

- (a) When a battery is connected to the plates of a $3.00\text{-}\mu\text{F}$ capacitor, it stores a charge of $27.0\ \mu\text{C}$. What is the voltage of the battery? (b) If the same capacitor is connected to another battery and $36.0\ \mu\text{C}$ of charge is stored on the capacitor, what is the voltage of the battery?
- Two conductors having net charges of $+10.0\ \mu\text{C}$ and $-10.0\ \mu\text{C}$ have a potential difference of $10.0\ \text{V}$ between them. (a) Determine the capacitance of the system. (b) What is the potential difference between the two conductors if the charges on each are increased to $+100\ \mu\text{C}$ and $-100\ \mu\text{C}$?
- (a) How much charge is on each plate of a $4.00\text{-}\mu\text{F}$ capacitor when it is connected to a 12.0-V battery? (b) If this same capacitor is connected to a 1.50-V battery, what charge is stored?

Section 26.2 Calculating Capacitance

- An air-filled spherical capacitor is constructed with inner- and outer-shell radii of $7.00\ \text{cm}$ and $14.0\ \text{cm}$, respectively. (a) Calculate the capacitance of the device. (b) What potential difference between the spheres results in a $4.00\text{-}\mu\text{C}$ charge on the capacitor?
- A 50.0-m length of coaxial cable has an inner conductor that has a diameter of $2.58\ \text{mm}$ and carries a charge of $8.10\ \mu\text{C}$. The surrounding conductor has an inner diameter of $7.27\ \text{mm}$ and a charge of $-8.10\ \mu\text{C}$. Assume the region between the conductors is air. (a) What is the capacitance of this cable? (b) What is the potential difference between the two conductors?
- (a) Regarding the Earth and a cloud layer $800\ \text{m}$ above the Earth as the “plates” of a capacitor, calculate the capacitance of the Earth–cloud layer system. Assume the cloud layer has an area of $1.00\ \text{km}^2$ and the air between the cloud and the ground is pure and dry. Assume charge builds up on the cloud and on the ground until a uniform electric field of $3.00 \times 10^6\ \text{N/C}$ throughout the space between them makes the air break down and conduct electricity as a lightning bolt. (b) What is the maximum charge the cloud can hold?
- When a potential difference of $150\ \text{V}$ is applied to the plates of a parallel-plate capacitor, the plates carry a surface charge density of $30.0\ \text{nC/cm}^2$. What is the spacing between the plates?
- An air-filled parallel-plate capacitor has plates of area $2.30\ \text{cm}^2$ separated by $1.50\ \text{mm}$. (a) Find the value of its capacitance. The capacitor is connected to a 12.0-V battery. (b) What is the charge on the capacitor? (c) What is the magnitude of the uniform electric field between the plates?
- An air-filled capacitor consists of two parallel plates, each with an area of $7.60\ \text{cm}^2$, separated by a distance of $1.80\ \text{mm}$. A 20.0-V potential difference is applied to these plates. Calculate (a) the electric field between the plates, (b) the surface charge density, (c) the capacitance, and (d) the charge on each plate.

- A variable air capacitor used in a radio tuning circuit is made of N semicircular plates, each of radius R and positioned a distance d from its neighbors, to which it is electrically connected. As shown in Figure P26.10, a second identical set of plates is enmeshed with the first set. Each plate in the second set is halfway between two plates of the first set. The second set can rotate as a unit. Determine the capacitance as a function of the angle of rotation θ , where $\theta = 0$ corresponds to the maximum capacitance.

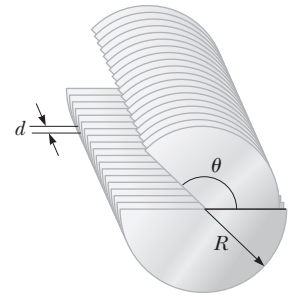


Figure P26.10

- An isolated, charged conducting sphere of radius $12.0\ \text{cm}$ creates an electric field of $4.90 \times 10^4\ \text{N/C}$ at a distance $21.0\ \text{cm}$ from its center. (a) What is its surface charge density? (b) What is its capacitance?
- Review.** A small object of mass m carries a charge q and is suspended by a thread between the vertical plates of a parallel-plate capacitor. The plate separation is d . If the thread makes an angle θ with the vertical, what is the potential difference between the plates?

Section 26.3 Combinations of Capacitors

- Two capacitors, $C_1 = 5.00\ \mu\text{F}$ and $C_2 = 12.0\ \mu\text{F}$, are connected in parallel, and the resulting combination is connected to a 9.00-V battery. Find (a) the equivalent capacitance of the combination, (b) the potential difference across each capacitor, and (c) the charge stored on each capacitor.
- What If?** The two capacitors of Problem 13 ($C_1 = 5.00\ \mu\text{F}$ and $C_2 = 12.0\ \mu\text{F}$) are now connected in series and to a 9.00-V battery. Find (a) the equivalent capacitance of the combination, (b) the potential difference across each capacitor, and (c) the charge on each capacitor.
- Find the equivalent capacitance of a $4.20\text{-}\mu\text{F}$ capacitor and an $8.50\text{-}\mu\text{F}$ capacitor when they are connected (a) in series and (b) in parallel.
- Given a $2.50\text{-}\mu\text{F}$ capacitor, a $6.25\text{-}\mu\text{F}$ capacitor, and a 6.00-V battery, find the charge on each capacitor if you connect them (a) in series across the battery and (b) in parallel across the battery.
- According to its design specification, the timer circuit delaying the closing of an elevator door is to have a capacitance of $32.0\ \mu\text{F}$ between two points A and B . When one circuit is being constructed, the inexpensive but durable capacitor installed between these two points is found to have capacitance $34.8\ \mu\text{F}$. To meet the specification, one additional capacitor can be placed between the two points. (a) Should it be in series or in parallel with the $34.8\text{-}\mu\text{F}$ capacitor? (b) What should be its capacitance? (c) **What If?** The next circuit comes down the assembly line with capacitance $29.8\ \mu\text{F}$ between A and B . To meet the specification, what additional capacitor should be installed in series or in parallel in that circuit?

18. Why is the following situation impossible? A technician is testing a circuit that contains a capacitance C . He realizes that a better design for the circuit would include a capacitance $\frac{7}{3}C$ rather than C . He has three additional capacitors, each with capacitance C . By combining these additional capacitors in a certain combination that is then placed in parallel with the original capacitor, he achieves the desired capacitance.

19. For the system of four capacitors shown in Figure P26.19, find (a) the equivalent capacitance of the system, (b) the charge on each capacitor, and (c) the potential difference across each capacitor.

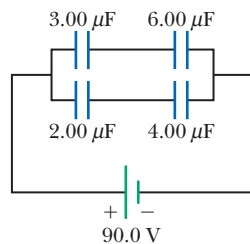


Figure P26.19

Problems 19 and 56.

20. Three capacitors are connected to a battery as shown in Figure P26.20. Their capacitances are $C_1 = 3C$, $C_2 = C$, and $C_3 = 5C$. (a) What is the equivalent capacitance of this set of capacitors? (b) State the ranking of the capacitors according to the charge they store from largest to smallest. (c) Rank the capacitors according to the potential differences across them from largest to smallest. (d) **What If?** Assume C_3 is increased. Explain what happens to the charge stored by each capacitor.

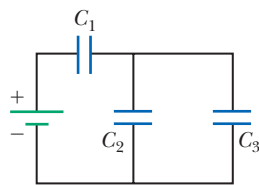


Figure P26.20

21. **M** A group of identical capacitors is connected first in series and then in parallel. The combined capacitance in parallel is 100 times larger than for the series connection. How many capacitors are in the group?

22. **W** (a) Find the equivalent capacitance between points a and b for the group of capacitors connected as shown in Figure P26.22. Take $C_1 = 5.00 \mu\text{F}$, $C_2 = 10.0 \mu\text{F}$, and $C_3 = 2.00 \mu\text{F}$. (b) What charge is stored on C_3 if the potential difference between points a and b is 60.0 V ?

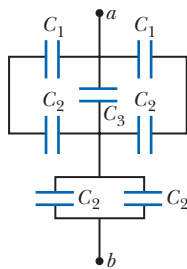


Figure P26.22

23. **M** Four capacitors are connected as shown in Figure P26.23. (a) Find the equivalent capacitance between points a and b . (b) Calculate the charge on each capacitor, taking $\Delta V_{ab} = 15.0 \text{ V}$.

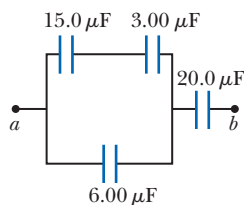


Figure P26.23

24. **M** Consider the circuit shown in Figure P26.24, where $C_1 = 6.00 \mu\text{F}$, $C_2 = 3.00 \mu\text{F}$, and $\Delta V = 20.0 \text{ V}$. Capacitor C_1

is first charged by closing switch S_1 . Switch S_1 is then opened, and the charged capacitor is connected to the uncharged capacitor by closing S_2 . Calculate (a) the initial charge acquired by C_1 and (b) the final charge on each capacitor.

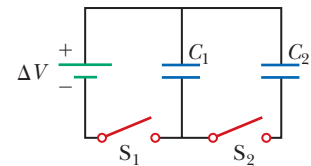


Figure P26.24

25. Find the equivalent capacitance between points a and b in the combination of capacitors shown in Figure P26.25.

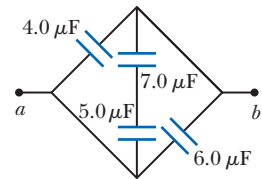


Figure P26.25

26. Find (a) the equivalent capacitance of the capacitors in Figure P26.26, (b) the charge on each capacitor, and (c) the potential difference across each capacitor.

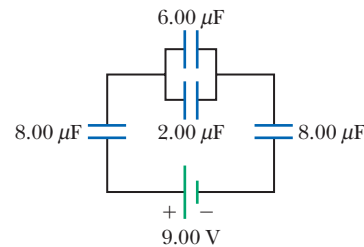


Figure P26.26

27. Two capacitors give an equivalent capacitance of 9.00 pF when connected in parallel and an equivalent capacitance of 2.00 pF when connected in series. What is the capacitance of each capacitor?

28. Two capacitors give an equivalent capacitance of C_p when connected in parallel and an equivalent capacitance of C_s when connected in series. What is the capacitance of each capacitor?

29. Consider three capacitors C_1 , C_2 , and C_3 and a battery. If only C_1 is connected to the battery, the charge on C_1 is $30.8 \mu\text{C}$. Now C_1 is disconnected, discharged, and connected in series with C_2 . When the series combination of C_2 and C_1 is connected across the battery, the charge on C_1 is $23.1 \mu\text{C}$. The circuit is disconnected, and both capacitors are discharged. Next, C_3 , C_1 , and the battery are connected in series, resulting in a charge on C_1 of $25.2 \mu\text{C}$. If, after being disconnected and discharged, C_1 , C_2 , and C_3 are connected in series with one another and with the battery, what is the charge on C_1 ?

Section 26.4 Energy Stored in a Charged Capacitor

30. The immediate cause of many deaths is ventricular fibrillation, which is an uncoordinated quivering of the heart. An electric shock to the chest can cause momentary paralysis of the heart muscle, after which the heart sometimes resumes its proper beating. One type of *defibrillator* (chapter-opening photo, page 777) applies a strong electric shock to the chest over a time interval of a few milliseconds. This device contains a

- capacitor of several microfarads, charged to several thousand volts. Electrodes called paddles are held against the chest on both sides of the heart, and the capacitor is discharged through the patient's chest. Assume an energy of 300 J is to be delivered from a 30.0- μF capacitor. To what potential difference must it be charged?
31. A 12.0-V battery is connected to a capacitor, resulting in 54.0 μC of charge stored on the capacitor. How much energy is stored in the capacitor?
32. (a) A 3.00- μF capacitor is connected to a 12.0-V battery. **W** How much energy is stored in the capacitor? (b) Had the capacitor been connected to a 6.00-V battery, how much energy would have been stored?
33. As a person moves about in a dry environment, electric charge accumulates on the person's body. Once it is at high voltage, either positive or negative, the body can discharge via sparks and shocks. Consider a human body isolated from ground, with the typical capacitance 150 pF. (a) What charge on the body will produce a potential of 10.0 kV? (b) Sensitive electronic devices can be destroyed by electrostatic discharge from a person. A particular device can be destroyed by a discharge releasing an energy of 250 μJ . To what voltage on the body does this situation correspond?
34. Two capacitors, $C_1 = 18.0 \mu\text{F}$ and $C_2 = 36.0 \mu\text{F}$, are connected in series, and a 12.0-V battery is connected across the two capacitors. Find (a) the equivalent capacitance and (b) the energy stored in this equivalent capacitance. (c) Find the energy stored in each individual capacitor. (d) Show that the sum of these two energies is the same as the energy found in part (b). (e) Will this equality always be true, or does it depend on the number of capacitors and their capacitances? (f) If the same capacitors were connected in parallel, what potential difference would be required across them so that the combination stores the same energy as in part (a)? (g) Which capacitor stores more energy in this situation, C_1 or C_2 ?
35. Two identical parallel-plate capacitors, each with capacitance 10.0 μF , are charged to potential difference 50.0 V and then disconnected from the battery. They are then connected to each other in parallel with plates of like sign connected. Finally, the plate separation in one of the capacitors is doubled. (a) Find the total energy of the system of two capacitors *before* the plate separation is doubled. (b) Find the potential difference across each capacitor *after* the plate separation is doubled. (c) Find the total energy of the system *after* the plate separation is doubled. (d) Reconcile the difference in the answers to parts (a) and (c) with the law of conservation of energy.
36. Two identical parallel-plate capacitors, each with capacitance C , are charged to potential difference ΔV and then disconnected from the battery. They are then connected to each other in parallel with plates of like sign connected. Finally, the plate separation in one of the capacitors is doubled. (a) Find the total energy of the system of two capacitors *before* the plate separation is doubled. (b) Find the potential difference across each capacitor *after* the plate separation is doubled. (c) Find the total energy of the system *after* the plate separation is doubled. (d) Reconcile the difference in the answers to parts (a) and (c) with the law of conservation of energy.
37. Two capacitors, $C_1 = 25.0 \mu\text{F}$ and $C_2 = 5.00 \mu\text{F}$, are connected in parallel and charged with a 100-V power supply. (a) Draw a circuit diagram and (b) calculate the total energy stored in the two capacitors. (c) **What If?** What potential difference would be required across the same two capacitors connected in series for the combination to store the same amount of energy as in part (b)? (d) Draw a circuit diagram of the circuit described in part (c).
- 38.** A parallel-plate capacitor has a charge Q and plates of area A . What force acts on one plate to attract it toward the other plate? Because the electric field between the plates is $E = Q/A\epsilon_0$, you might think the force is $F = QE = Q^2/A\epsilon_0$. This conclusion is wrong because the field E includes contributions from both plates, and the field created by the positive plate cannot exert any force on the positive plate. Show that the force exerted on each plate is actually $F = Q^2/2A\epsilon_0$. *Suggestion:* Let $C = \epsilon_0 A/x$ for an arbitrary plate separation x and note that the work done in separating the two charged plates is $W = \int F dx$.
- 39. Review.** A storm cloud and the ground represent the plates of a capacitor. During a storm, the capacitor has a potential difference of $1.00 \times 10^8 \text{ V}$ between its plates and a charge of 50.0 C. A lightning strike delivers 1.00% of the energy of the capacitor to a tree on the ground. How much sap in the tree can be boiled away? Model the sap as water initially at 30.0°C. Water has a specific heat of 4 186 J/kg \cdot °C, a boiling point of 100°C, and a latent heat of vaporization of $2.26 \times 10^6 \text{ J/kg}$.
- 40. GP** Consider two conducting spheres with radii R_1 and R_2 separated by a distance much greater than either radius. A total charge Q is shared between the spheres. We wish to show that when the electric potential energy of the system has a minimum value, the potential difference between the spheres is zero. The total charge Q is equal to $q_1 + q_2$, where q_1 represents the charge on the first sphere and q_2 the charge on the second. Because the spheres are very far apart, you can assume the charge of each is uniformly distributed over its surface. (a) Show that the energy associated with a single conducting sphere of radius R and charge q surrounded by a vacuum is $U = k_e q^2/2R$. (b) Find the total energy of the system of two spheres in terms of q_1 , the total charge Q , and the radii R_1 and R_2 . (c) To minimize the energy, differentiate the result to part (b) with respect to q_1 and set the derivative equal to zero. Solve for q_1 in terms of Q and the radii. (d) From the result to part (c), find the charge q_2 . (e) Find the potential of each sphere. (f) What is the potential difference between the spheres?
- 41. Review.** The circuit in Figure P26.41 (page 804) consists of two identical, parallel metal plates connected to identical metal springs, a switch, and a 100-V battery.

With the switch open, the plates are uncharged, are separated by a distance $d = 8.00$ mm, and have a capacitance $C = 2.00$ μF . When the switch is closed, the distance between the plates decreases by a factor of 0.500. (a) How much charge collects on each plate? (b) What is the spring constant for each spring?

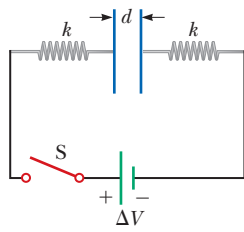


Figure P26.41

Section 26.5 Capacitors with Dielectrics

42. A supermarket sells rolls of aluminum foil, plastic wrap, and waxed paper. (a) Describe a capacitor made from such materials. Compute order-of-magnitude estimates for (b) its capacitance and (c) its breakdown voltage.
43. (a) How much charge can be placed on a capacitor with **W** air between the plates before it breaks down if the area of each plate is 5.00 cm^2 ? (b) **What If?** Find the maximum charge if polystyrene is used between the plates instead of air.
44. The voltage across an air-filled parallel-plate capacitor is measured to be 85.0 V. When a dielectric is inserted and completely fills the space between the plates as in Figure P26.44, the voltage drops to 25.0 V. (a) What is the dielectric constant of the inserted material? (b) Can you identify the dielectric? If so, what is it? (c) If the dielectric does not completely fill the space between the plates, what could you conclude about the voltage across the plates?

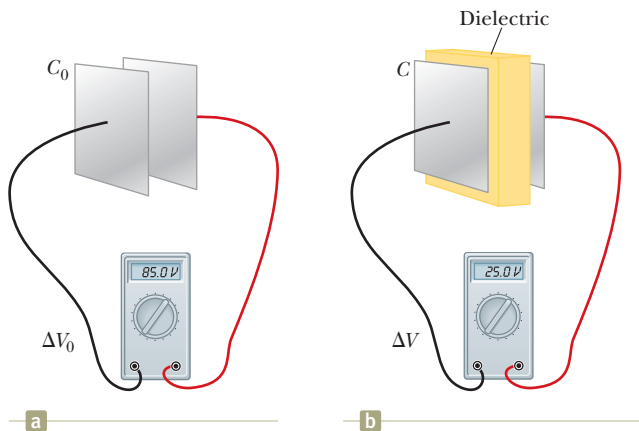


Figure P26.44

45. Determine (a) the capacitance and (b) the maximum potential difference that can be applied to a Teflon-filled parallel-plate capacitor having a plate area of 1.75 cm^2 and a plate separation of 0.0400 mm.
46. **W** A commercial capacitor is to be constructed as shown in Figure P26.46. This particular capacitor is made from two strips of aluminum foil separated by a strip of paraffin-coated paper. Each strip of foil and paper is 7.00 cm wide. The foil is 0.00400 mm thick, and the paper is 0.0250 mm thick and has a dielectric constant of 3.70 . What length should the strips have if a capaci-

tance of 9.50×10^{-8} F is desired before the capacitor is rolled up? (Adding a second strip of paper and rolling the capacitor would effectively double its capacitance by allowing charge storage on both sides of each strip of foil.)

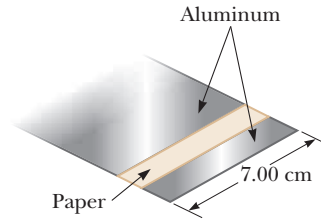


Figure P26.46

47. A parallel-plate capacitor in air has a plate separation of 1.50 cm and a plate area of 25.0 cm^2 . The plates are charged to a potential difference of 250 V and disconnected from the source. The capacitor is then immersed in distilled water. Assume the liquid is an insulator. Determine (a) the charge on the plates before and after immersion, (b) the capacitance and potential difference after immersion, and (c) the change in energy of the capacitor.
48. Each capacitor in the combination shown in Figure P26.48 has a breakdown voltage of 15.0 V. What is the breakdown voltage of the combination?

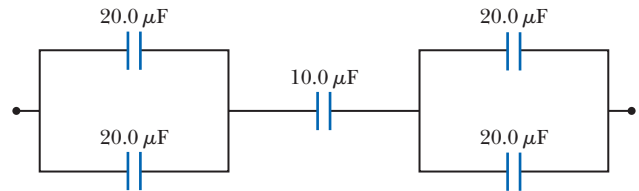


Figure P26.48

49. **AMT** A 2.00 -nF parallel-plate capacitor is charged to an initial potential difference $\Delta V_i = 100$ V and is then isolated. The dielectric material between the plates is mica, with a dielectric constant of 5.00 . (a) How much work is required to withdraw the mica sheet? (b) What is the potential difference across the capacitor after the mica is withdrawn?

Section 26.6 Electric Dipole in an Electric Field

50. **M** A small, rigid object carries positive and negative 3.50 -nC charges. It is oriented so that the positive charge has coordinates $(-1.20$ mm, 1.10 mm) and the negative charge is at the point $(1.40$ mm, -1.30 mm). (a) Find the electric dipole moment of the object. The object is placed in an electric field $\vec{E} = (7.80 \times 10^3 \hat{i} - 4.90 \times 10^3 \hat{j})$ N/C. (b) Find the torque acting on the object. (c) Find the potential energy of the object-field system when the object is in this orientation. (d) Assuming the orientation of the object can change, find the difference between the maximum and minimum potential energies of the system.
51. **AMT** An infinite line of positive charge lies along the y axis, with charge density $\lambda = 2.00$ $\mu\text{C}/\text{m}$. A dipole is placed

with its center along the x axis at $x = 25.0$ cm. The dipole consists of two charges $\pm 10.0 \mu\text{C}$ separated by 2.00 cm. The axis of the dipole makes an angle of 35.0° with the x axis, and the positive charge is farther from the line of charge than the negative charge. Find the net force exerted on the dipole.

52. A small object with electric dipole moment \vec{p} is placed in a nonuniform electric field $\vec{E} = E(x)\hat{i}$. That is, the field is in the x direction, and its magnitude depends only on the coordinate x . Let θ represent the angle between the dipole moment and the x direction. Prove that the net force on the dipole is

$$F = p \left(\frac{dE}{dx} \right) \cos \theta$$

acting in the direction of increasing field.

Section 26.7 An Atomic Description of Dielectrics

53. The general form of Gauss's law describes how a charge creates an electric field in a material, as well as in vacuum:

$$\int \vec{E} \cdot d\vec{A} = \frac{q_{\text{in}}}{\epsilon}$$

where $\epsilon = \kappa\epsilon_0$ is the permittivity of the material. (a) A sheet with charge Q uniformly distributed over its area A is surrounded by a dielectric. Show that the sheet creates a uniform electric field at nearby points with magnitude $E = Q/2A\epsilon$. (b) Two large sheets of area A , carrying opposite charges of equal magnitude Q , are a small distance d apart. Show that they create uniform electric field in the space between them with magnitude $E = Q/A\epsilon$. (c) Assume the negative plate is at zero potential. Show that the positive plate is at potential $Qd/A\epsilon$. (d) Show that the capacitance of the pair of plates is given by $C = A\epsilon/d = \kappa A\epsilon_0/d$.

Additional Problems

54. Find the equivalent capacitance of the group of capacitors shown in Figure P26.54.

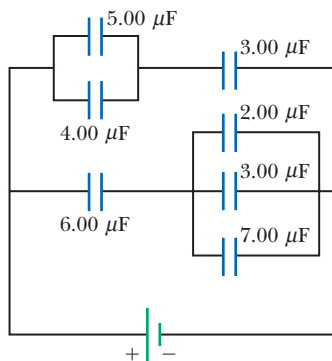


Figure P26.54

55. Four parallel metal plates P_1 , P_2 , P_3 , and P_4 , each of area 7.50 cm^2 , are separated successively by a distance $d = 1.19 \text{ mm}$ as shown in Figure P26.55. Plate P_1 is connected to the negative terminal of a battery, and P_2 is connected to the positive terminal. The

battery maintains a potential difference of 12.0 V . (a) If P_3 is connected to the negative terminal, what is the capacitance of the three-plate system $P_1P_2P_3$? (b) What is the charge on P_3 ? (c) If P_4 is now connected to the positive terminal, what is the capacitance of the four-plate system $P_1P_2P_3P_4$? (d) What is the charge on P_4 ?

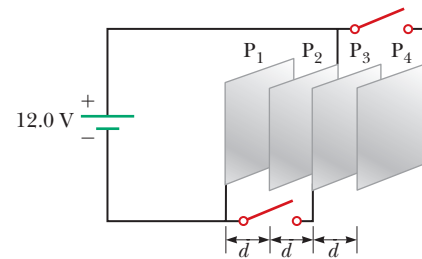


Figure P26.55

56. For the system of four capacitors shown in Figure P26.19, find (a) the total energy stored in the system and (b) the energy stored by each capacitor. (c) Compare the sum of the answers in part (b) with your result to part (a) and explain your observation.
57. A uniform electric field $E = 3\,000 \text{ V/m}$ exists within a certain region. What volume of space contains an energy equal to $1.00 \times 10^{-7} \text{ J}$? Express your answer in cubic meters and in liters.
58. Two large, parallel metal plates, each of area A , are oriented horizontally and separated by a distance $3d$. A grounded conducting wire joins them, and initially each plate carries no charge. Now a third identical plate carrying charge Q is inserted between the two plates, parallel to them and located a distance d from the upper plate as shown in Figure P26.58. (a) What induced charge appears on each of the two original plates? (b) What potential difference appears between the middle plate and each of the other plates?

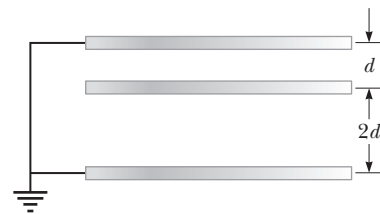


Figure P26.58

59. A parallel-plate capacitor is constructed using a dielectric material whose dielectric constant is 3.00 and whose dielectric strength is $2.00 \times 10^8 \text{ V/m}$. The desired capacitance is $0.250 \mu\text{F}$, and the capacitor must withstand a maximum potential difference of 4.00 kV . Find the minimum area of the capacitor plates.
60. Why is the following situation impossible? A $10.0\text{-}\mu\text{F}$ capacitor has plates with vacuum between them. The capacitor is charged so that it stores 0.050 J of energy. A particle with charge $-3.00 \mu\text{C}$ is fired from the positive plate toward the negative plate with an initial kinetic energy equal to $1.00 \times 10^{-4} \text{ J}$. The particle arrives at the negative plate with a reduced kinetic energy.

61. A model of a red blood cell portrays the cell as a capacitor with two spherical plates. It is a positively charged conducting liquid sphere of area A , separated by an insulating membrane of thickness t from the surrounding negatively charged conducting fluid. Tiny electrodes introduced into the cell show a potential difference of 100 mV across the membrane. Take the membrane's thickness as 100 nm and its dielectric constant as 5.00. (a) Assume that a typical red blood cell has a mass of 1.00×10^{-12} kg and density 1.100 kg/m³. Calculate its volume and its surface area. (b) Find the capacitance of the cell. (c) Calculate the charge on the surfaces of the membrane. How many electronic charges does this charge represent?

62. A parallel-plate capacitor with vacuum between its horizontal plates has a capacitance of $25.0 \mu\text{F}$. A nonconducting liquid with dielectric constant 6.50 is poured into the space between the plates, filling up a fraction f of its volume. (a) Find the new capacitance as a function of f . (b) What should you expect the capacitance to be when $f = 0$? Does your expression from part (a) agree with your answer? (c) What capacitance should you expect when $f = 1$? Does the expression from part (a) agree with your answer?

63. A $10.0\text{-}\mu\text{F}$ capacitor is charged to 15.0 V. It is next connected in series with an uncharged $5.00\text{-}\mu\text{F}$ capacitor. The series combination is finally connected across a 50.0-V battery as diagrammed in Figure P26.63. Find the new potential differences across the $5.00\text{-}\mu\text{F}$ and $10.0\text{-}\mu\text{F}$ capacitors after the switch is thrown closed.

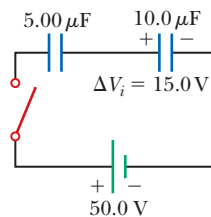


Figure P26.63

64. Assume that the internal diameter of the Geiger-Mueller tube described in Problem 68 in Chapter 25 is 2.50 cm and that the wire along the axis has a diameter of 0.200 mm. The dielectric strength of the gas between the central wire and the cylinder is 1.20×10^6 V/m. Use the result of that problem to calculate the maximum potential difference that can be applied between the wire and the cylinder before breakdown occurs in the gas.

65. Two square plates of sides ℓ are placed parallel to each other with separation d as suggested in Figure P26.65. You may assume d is much less than ℓ . The plates carry uniformly distributed static charges $+Q_0$ and $-Q_0$. A block of metal has width ℓ , length ℓ , and thickness slightly less than d . It is inserted a distance x into the space between the plates. The charges on the plates remain uniformly distributed as the block slides in. In a static situation, a metal prevents an electric field from penetrating inside it. The metal can be thought of as a perfect dielectric, with $\kappa \rightarrow \infty$. (a) Calculate the stored energy in the system as a function of x . (b) Find the direction and magnitude of the force that acts on the metallic block. (c) The area of the advancing front face of the block is essentially equal to ℓd . Considering the force on the block as acting on this face, find the stress (force per area)

on it. (d) Express the energy density in the electric field between the charged plates in terms of Q_0 , ℓ , d , and ϵ_0 . (e) Explain how the answers to parts (c) and (d) compare with each other.

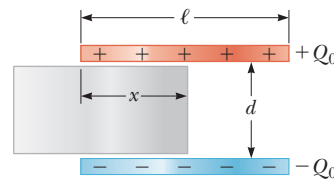


Figure P26.65

66. (a) Two spheres have radii a and b , and their centers are a distance d apart. Show that the capacitance of this system is

$$C = \frac{4\pi\epsilon_0}{\frac{1}{a} + \frac{1}{b} - \frac{2}{d}}$$

provided d is large compared with a and b . *Suggestion:* Because the spheres are far apart, assume the potential of each equals the sum of the potentials due to each sphere. (b) Show that as d approaches infinity, the above result reduces to that of two spherical capacitors in series.

67. A capacitor of unknown capacitance has been charged to a potential difference of 100 V and then disconnected from the battery. When the charged capacitor is then connected in parallel to an uncharged $10.0\text{-}\mu\text{F}$ capacitor, the potential difference across the combination is 30.0 V. Calculate the unknown capacitance.

68. A parallel-plate capacitor of plate separation d is charged to a potential difference ΔV_0 . A dielectric slab of thickness d and dielectric constant κ is introduced between the plates while the battery remains connected to the plates. (a) Show that the ratio of energy stored after the dielectric is introduced to the energy stored in the empty capacitor is $U/U_0 = \kappa$. (b) Give a physical explanation for this increase in stored energy. (c) What happens to the charge on the capacitor? *Note:* This situation is not the same as in Example 26.5, in which the battery was removed from the circuit before the dielectric was introduced.

69. Capacitors $C_1 = 6.00 \mu\text{F}$ and $C_2 = 2.00 \mu\text{F}$ are charged as a parallel combination across a 250-V battery. The capacitors are disconnected from the battery and from each other. They are then connected positive plate to negative plate and negative plate to positive plate. Calculate the resulting charge on each capacitor.

70. Example 26.1 explored a cylindrical capacitor of length ℓ with radii a and b for the two conductors. In the What If? section of that example, it was claimed that increasing ℓ by 10% is more effective in terms of increasing the capacitance than increasing a by 10% if $b > 2.85a$. Verify this claim mathematically.

71. To repair a power supply for a stereo amplifier, an electronics technician needs a $100\text{-}\mu\text{F}$ capacitor capable of withstanding a potential difference of 90 V between the

plates. The immediately available supply is a box of five $100\text{-}\mu\text{F}$ capacitors, each having a maximum voltage capability of 50 V . (a) What combination of these capacitors has the proper electrical characteristics? Will the technician use all the capacitors in the box? Explain your answers. (b) In the combination of capacitors obtained in part (a), what will be the maximum voltage across each of the capacitors used?

Challenge Problems

72. The inner conductor of a coaxial cable has a radius of 0.800 mm , and the outer conductor's inside radius is 3.00 mm . The space between the conductors is filled with polyethylene, which has a dielectric constant of 2.30 and a dielectric strength of $18.0 \times 10^6\text{ V/m}$. What is the maximum potential difference this cable can withstand?

73. Some physical systems possessing capacitance continuously distributed over space can be modeled as an infinite array of discrete circuit elements. Examples are a microwave waveguide and the axon of a nerve cell. To practice analysis of an infinite array, determine the equivalent capacitance C between terminals X and Y of the infinite set of capacitors represented in Figure P26.73. Each capacitor has capacitance C_0 . *Suggestion:* Imagine that the ladder is cut at the line AB and note that the equivalent capacitance of the infinite section to the right of AB is also C .

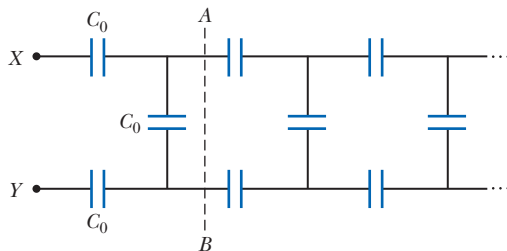


Figure P26.73

74. Consider two long, parallel, and oppositely charged wires of radius r with their centers separated by a distance D that is much larger than r . Assuming the charge is distributed uniformly on the surface of each wire, show that the capacitance per unit length of this pair of wires is

$$\frac{C}{\ell} = \frac{\pi\epsilon_0}{\ln(D/r)}$$

75. Determine the equivalent capacitance of the combination shown in Figure P26.75. *Suggestion:* Consider the symmetry involved.

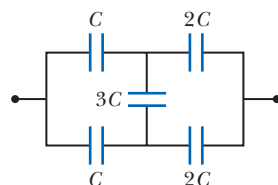


Figure P26.75

76. A parallel-plate capacitor with plates of area LW and plate separation t has the region between its plates filled with wedges of two dielectric materials as shown in Figure P26.76. Assume t is much less than both L and W . (a) Determine its capacitance. (b) Should the capacitance be the same if the labels κ_1 and κ_2 are interchanged? Demonstrate that your expression does or does not have this property. (c) Show that if κ_1 and κ_2 approach equality to a common value κ , your result becomes the same as the capacitance of a capacitor containing a single dielectric: $C = \kappa\epsilon_0 LW/t$.

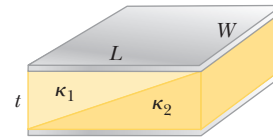


Figure P26.76

77. Calculate the equivalent capacitance between points a and b in Figure P26.77. Notice that this system is not a simple series or parallel combination. *Suggestion:* Assume a potential difference ΔV between points a and b . Write expressions for ΔV_{ab} in terms of the charges and capacitances for the various possible pathways from a to b and require conservation of charge for those capacitor plates that are connected to each other.

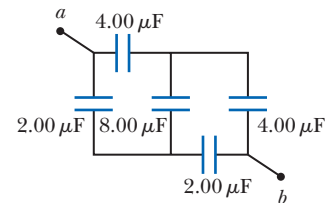


Figure P26.77

78. A capacitor is constructed from two square, metallic plates of sides ℓ and separation d . Charges $+Q$ and $-Q$ are placed on the plates, and the power supply is then removed. A material of dielectric constant κ is inserted a distance x into the capacitor as shown in Figure P26.78. Assume d is much smaller than x . (a) Find the equivalent capacitance of the device. (b) Calculate the energy stored in the capacitor. (c) Find the direction and magnitude of the force exerted by the plates on the dielectric. (d) Obtain a numerical value for the force when $x = \ell/2$, assuming $\ell = 5.00\text{ cm}$, $d = 2.00\text{ mm}$, the dielectric is glass ($\kappa = 4.50$), and the capacitor was charged to $2.00 \times 10^3\text{ V}$ before the dielectric was inserted. *Suggestion:* The system can be considered as two capacitors connected in parallel.

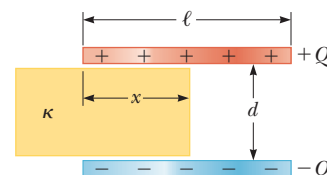


Figure P26.78

Current and Resistance

- 27.1 Electric Current
- 27.2 Resistance
- 27.3 A Model for Electrical Conduction
- 27.4 Resistance and Temperature
- 27.5 Superconductors
- 27.6 Electrical Power



These two lightbulbs provide similar power output by visible light (electromagnetic radiation). The compact fluorescent bulb on the left, however, produces this light output with far less input by electrical transmission than the incandescent bulb on the right. The fluorescent bulb, therefore, is less costly to operate and saves valuable resources needed to generate electricity. (Christina Richards/Shutterstock.com)

We now consider situations involving electric charges that are in motion through some region of space. We use the term *electric current*, or simply *current*, to describe the rate of flow of charge. Most practical applications of electricity deal with electric currents, including a variety of home appliances. For example, the voltage from a wall plug produces a current in the coils of a toaster when it is turned on. In these common situations, current exists in a conductor such as a copper wire. Currents can also exist outside a conductor. For instance, a beam of electrons in a particle accelerator constitutes a current.

This chapter begins with the definition of current. A microscopic description of current is given, and some factors that contribute to the opposition to the flow of charge in conductors are discussed. A classical model is used to describe electrical conduction in metals, and some limitations of this model are cited. We also define electrical resistance and introduce a new circuit element, the resistor. We conclude by discussing the rate at which energy is transferred to a device in an electric circuit. The energy transfer mechanism in Equation 8.2 that corresponds to this process is electrical transmission T_{ET} .

27.1 Electric Current

In this section, we study the flow of electric charges through a piece of material. The amount of flow depends on both the material through which the charges are

passing and the potential difference across the material. Whenever there is a net flow of charge through some region, an electric *current* is said to exist.

It is instructive to draw an analogy between water flow and current. The flow of water in a plumbing pipe can be quantified by specifying the amount of water that emerges from a faucet during a given time interval, often measured in liters per minute. A river current can be characterized by describing the rate at which the water flows past a particular location. For example, the flow over the brink at Niagara Falls is maintained at rates between 1 400 m³/s and 2 800 m³/s.

There is also an analogy between thermal conduction and current. In Section 20.7, we discussed the flow of energy by heat through a sample of material. The rate of energy flow is determined by the material as well as the temperature difference across the material as described by Equation 20.15.

To define current quantitatively, suppose charges are moving perpendicular to a surface of area A as shown in Figure 27.1. (This area could be the cross-sectional area of a wire, for example.) The **current** is defined as the rate at which charge flows through this surface. If ΔQ is the amount of charge that passes through this surface in a time interval Δt , the **average current** I_{avg} is equal to the charge that passes through A per unit time:

$$I_{\text{avg}} = \frac{\Delta Q}{\Delta t} \quad (27.1)$$

If the rate at which charge flows varies in time, the current varies in time; we define the **instantaneous current** I as the limit of the average current as $\Delta t \rightarrow 0$:

$$I \equiv \frac{dQ}{dt} \quad (27.2)$$

The SI unit of current is the **ampere** (A):

$$1 \text{ A} = 1 \text{ C/s} \quad (27.3)$$

That is, 1 A of current is equivalent to 1 C of charge passing through a surface in 1 s.

The charged particles passing through the surface in Figure 27.1 can be positive, negative, or both. It is conventional to assign to the current the same direction as the flow of positive charge. In electrical conductors such as copper or aluminum, the current results from the motion of negatively charged electrons. Therefore, in an ordinary conductor, the direction of the current is opposite the direction of flow of electrons. For a beam of positively charged protons in an accelerator, however, the current is in the direction of motion of the protons. In some cases—such as those involving gases and electrolytes, for instance—the current is the result of the flow of both positive and negative charges. It is common to refer to a moving charge (positive or negative) as a mobile **charge carrier**.

If the ends of a conducting wire are connected to form a loop, all points on the loop are at the same electric potential; hence, the electric field is zero within and at the surface of the conductor. Because the electric field is zero, there is no net transport of charge through the wire; therefore, there is no current. If the ends of the conducting wire are connected to a battery, however, all points on the loop are not at the same potential. The battery sets up a potential difference between the ends of the loop, creating an electric field within the wire. The electric field exerts forces on the electrons in the wire, causing them to move in the wire and therefore creating a current.

Microscopic Model of Current

We can relate current to the motion of the charge carriers by describing a microscopic model of conduction in a metal. Consider the current in a cylindrical

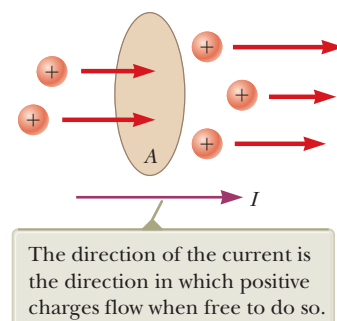


Figure 27.1 Charges in motion through an area A . The time rate at which charge flows through the area is defined as the current I .

◀ Electric current

Pitfall Prevention 27.1

"Current Flow" Is Redundant

The phrase *current flow* is commonly used, although it is technically incorrect because current is a flow (of charge). This wording is similar to the phrase *heat transfer*, which is also redundant because heat is a transfer (of energy). We will avoid this phrase and speak of *flow of charge* or *charge flow*.

Pitfall Prevention 27.2

Batteries Do Not Supply Electrons

A battery does not supply electrons to the circuit. It establishes the electric field that exerts a force on electrons already in the wires and elements of the circuit.

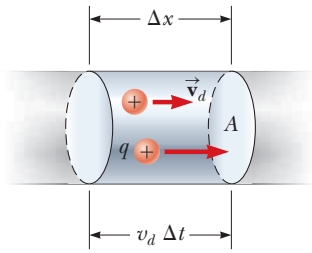


Figure 27.2 A segment of a uniform conductor of cross-sectional area A .

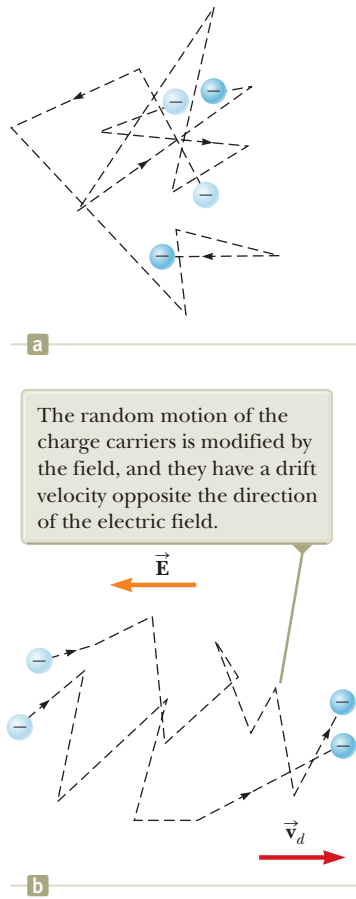


Figure 27.3 (a) A schematic diagram of the random motion of two charge carriers in a conductor in the absence of an electric field. The drift velocity is zero. (b) The motion of the charge carriers in a conductor in the presence of an electric field. Because of the acceleration of the charge carriers due to the electric force, the paths are actually parabolic. The drift speed, however, is much smaller than the average speed, so the parabolic shape is not visible on this scale.

conductor of cross-sectional area A (Fig. 27.2). The volume of a segment of the conductor of length Δx (between the two circular cross sections shown in Fig. 27.2) is $A \Delta x$. If n represents the number of mobile charge carriers per unit volume (in other words, the charge carrier density), the number of carriers in the segment is $nA \Delta x$. Therefore, the total charge ΔQ in this segment is

$$\Delta Q = (nA \Delta x)q$$

where q is the charge on each carrier. If the carriers move with a velocity \vec{v}_d parallel to the axis of the cylinder, the magnitude of the displacement they experience in the x direction in a time interval Δt is $\Delta x = v_d \Delta t$. Let Δt be the time interval required for the charge carriers in the segment to move through a displacement whose magnitude is equal to the length of the segment. This time interval is also the same as that required for all the charge carriers in the segment to pass through the circular area at one end. With this choice, we can write ΔQ as

$$\Delta Q = (nAv_d \Delta t)q$$

Dividing both sides of this equation by Δt , we find that the average current in the conductor is

$$I_{\text{avg}} = \frac{\Delta Q}{\Delta t} = nqv_d A \quad (27.4)$$

In reality, the speed of the charge carriers v_d is an average speed called the **drift speed**. To understand the meaning of drift speed, consider a conductor in which the charge carriers are free electrons. If the conductor is isolated—that is, the potential difference across it is zero—these electrons undergo random motion that is analogous to the motion of gas molecules. The electrons collide repeatedly with the metal atoms, and their resultant motion is complicated and zigzagged as in Figure 27.3a. As discussed earlier, when a potential difference is applied across the conductor (for example, by means of a battery), an electric field is set up in the conductor; this field exerts an electric force on the electrons, producing a current. In addition to the zigzag motion due to the collisions with the metal atoms, the electrons move slowly along the conductor (in a direction opposite that of \vec{E}) at the **drift velocity** \vec{v}_d as shown in Figure 27.3b.

You can think of the atom–electron collisions in a conductor as an effective internal friction (or drag force) similar to that experienced by a liquid’s molecules flowing through a pipe stuffed with steel wool. The energy transferred from the electrons to the metal atoms during collisions causes an increase in the atom’s vibrational energy and a corresponding increase in the conductor’s temperature.

Quick Quiz 27.1 Consider positive and negative charges moving horizontally through the four regions shown in Figure 27.4. Rank the current in these four regions from highest to lowest.

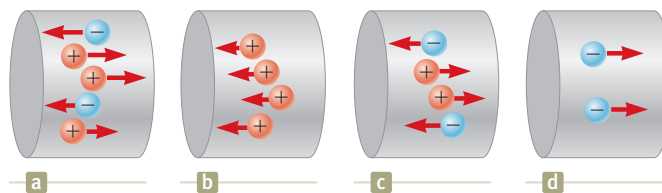


Figure 27.4 (Quick Quiz 27.1) Charges move through four regions.

Example 27.1 Drift Speed in a Copper Wire

The 12-gauge copper wire in a typical residential building has a cross-sectional area of $3.31 \times 10^{-6} \text{ m}^2$. It carries a constant current of 10.0 A. What is the drift speed of the electrons in the wire? Assume each copper atom contributes one free electron to the current. The density of copper is 8.92 g/cm^3 .

SOLUTION

Conceptualize Imagine electrons following a zigzag motion such as that in Figure 27.3a, with a drift velocity parallel to the wire superimposed on the motion as in Figure 27.3b. As mentioned earlier, the drift speed is small, and this example helps us quantify the speed.

Categorize We evaluate the drift speed using Equation 27.4. Because the current is constant, the average current during any time interval is the same as the constant current: $I_{\text{avg}} = I$.

Analyze The periodic table of the elements in Appendix C shows that the molar mass of copper is $M = 63.5 \text{ g/mol}$. Recall that 1 mol of any substance contains Avogadro's number of atoms ($N_A = 6.02 \times 10^{23} \text{ mol}^{-1}$).

Use the molar mass and the density of copper to find the volume of 1 mole of copper:

$$V = \frac{M}{\rho}$$

From the assumption that each copper atom contributes one free electron to the current, find the electron density in copper:

$$n = \frac{N_A}{V} = \frac{N_A \rho}{M}$$

Solve Equation 27.4 for the drift speed and substitute for the electron density:

$$v_d = \frac{I_{\text{avg}}}{nqA} = \frac{I}{nqA} = \frac{IM}{qAN_A\rho}$$

Substitute numerical values:

$$\begin{aligned} v_d &= \frac{(10.0 \text{ A})(0.0635 \text{ kg/mol})}{(1.60 \times 10^{-19} \text{ C})(3.31 \times 10^{-6} \text{ m}^2)(6.02 \times 10^{23} \text{ mol}^{-1})(8920 \text{ kg/m}^3)} \\ &= 2.23 \times 10^{-4} \text{ m/s} \end{aligned}$$

Finalize This result shows that typical drift speeds are very small. For instance, electrons traveling with a speed of $2.23 \times 10^{-4} \text{ m/s}$ would take about 75 min to travel 1 m! You might therefore wonder why a light turns on almost instantaneously when its switch is thrown. In a conductor, changes in the electric field that drives the free electrons according to the particle in a field model travel through the conductor with a speed close to that of light. So, when you flip on a light switch, electrons already in the filament of the lightbulb experience electric forces and begin moving after a time interval on the order of nanoseconds.

27.2 Resistance

In Section 24.4, we argued that the electric field inside a conductor is zero. This statement is true, however, *only* if the conductor is in static equilibrium as stated in that discussion. The purpose of this section is to describe what happens when there is a nonzero electric field in the conductor. As we saw in Section 27.1, a current exists in the wire in this case.

Consider a conductor of cross-sectional area A carrying a current I . The **current density** J in the conductor is defined as the current per unit area. Because the current $I = nqv_d A$, the current density is

$$J \equiv \frac{I}{A} = nqv_d \quad (27.5) \quad \leftarrow \text{Current density}$$

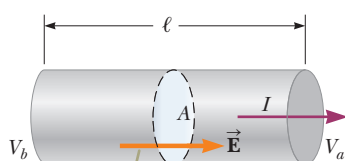


© Bettmann/Corbis

Georg Simon Ohm

German physicist (1789–1854)

Ohm, a high school teacher and later a professor at the University of Munich, formulated the concept of resistance and discovered the proportionalities expressed in Equations 27.6 and 27.7.



A potential difference $\Delta V = V_b - V_a$ maintained across the conductor sets up an electric field \vec{E} , and this field produces a current I that is proportional to the potential difference.

Figure 27.5 A uniform conductor of length ℓ and cross-sectional area A .

Pitfall Prevention 27.3

Equation 27.7 Is Not Ohm's Law

Many individuals call Equation 27.7 Ohm's law, but that is incorrect. This equation is simply the definition of resistance, and it provides an important relationship between voltage, current, and resistance. Ohm's law is related to a proportionality of J to E (Eq. 27.6) or, equivalently, of I to ΔV , which, from Equation 27.7, indicates that the resistance is constant, independent of the applied voltage. We will see some devices for which Equation 27.7 correctly describes their resistance, but that do *not* obey Ohm's law.

where J has SI units of amperes per meter squared. This expression is valid only if the current density is uniform and only if the surface of cross-sectional area A is perpendicular to the direction of the current.

A current density and an electric field are established in a conductor whenever a potential difference is maintained across the conductor. In some materials, the current density is proportional to the electric field:

$$J = \sigma E \quad (27.6)$$

where the constant of proportionality σ is called the **conductivity** of the conductor.¹ Materials that obey Equation 27.6 are said to follow **Ohm's law**, named after Georg Simon Ohm. More specifically, Ohm's law states the following:

For many materials (including most metals), the ratio of the current density to the electric field is a constant σ that is independent of the electric field producing the current.

Materials and devices that obey Ohm's law and hence demonstrate this simple relationship between E and J are said to be *ohmic*. Experimentally, however, it is found that not all materials and devices have this property. Those that do not obey Ohm's law are said to be *nonohmic*. Ohm's law is not a fundamental law of nature; rather, it is an empirical relationship valid only for certain situations.

We can obtain an equation useful in practical applications by considering a segment of straight wire of uniform cross-sectional area A and length ℓ as shown in Figure 27.5. A potential difference $\Delta V = V_b - V_a$ is maintained across the wire, creating in the wire an electric field and a current. If the field is assumed to be uniform, the magnitude of the potential difference across the wire is related to the field within the wire through Equation 25.6,

$$\Delta V = E\ell$$

Therefore, we can express the current density (Eq. 27.6) in the wire as

$$J = \sigma \frac{\Delta V}{\ell}$$

Because $J = I/A$, the potential difference across the wire is

$$\Delta V = \frac{\ell}{\sigma} J = \left(\frac{\ell}{\sigma A} \right) I = R I$$

The quantity $R = \ell/\sigma A$ is called the **resistance** of the conductor. We define the resistance as the ratio of the potential difference across a conductor to the current in the conductor:

$$R \equiv \frac{\Delta V}{I} \quad (27.7)$$

We will use this equation again and again when studying electric circuits. This result shows that resistance has SI units of volts per ampere. One volt per ampere is defined to be one **ohm** (Ω):

$$1 \Omega \equiv 1 \text{ V/A} \quad (27.8)$$

Equation 27.7 shows that if a potential difference of 1 V across a conductor causes a current of 1 A, the resistance of the conductor is 1 Ω . For example, if an electrical appliance connected to a 120-V source of potential difference carries a current of 6 A, its resistance is 20 Ω .

Most electric circuits use circuit elements called **resistors** to control the current in the various parts of the circuit. As with capacitors in Chapter 26, many resistors are built into integrated circuit chips, but stand-alone resistors are still available and

¹Do not confuse conductivity σ with surface charge density, for which the same symbol is used.

Table 27.1 Color Coding for Resistors

Color	Number	Multiplier	Tolerance
Black	0	1	
Brown	1	10^1	
Red	2	10^2	
Orange	3	10^3	
Yellow	4	10^4	
Green	5	10^5	
Blue	6	10^6	
Violet	7	10^7	
Gray	8	10^8	
White	9	10^9	
Gold		10^{-1}	5%
Silver		10^{-2}	10%
Colorless			20%

widely used. Two common types are the *composition resistor*, which contains carbon, and the *wire-wound resistor*, which consists of a coil of wire. Values of resistors in ohms are normally indicated by color coding as shown in Figure 27.6 and Table 27.1. The first two colors on a resistor give the first two digits in the resistance value, with the decimal place to the right of the second digit. The third color represents the power of 10 for the multiplier of the resistance value. The last color is the tolerance of the resistance value. As an example, the four colors on the resistor at the bottom of Figure 27.6 are yellow (= 4), violet (= 7), black (= 10^0), and gold (= 5%), and so the resistance value is $47 \times 10^0 = 47 \Omega$ with a tolerance value of $5\% = 2 \Omega$.

The inverse of conductivity is **resistivity**² ρ :

$$\rho = \frac{1}{\sigma} \quad (27.9)$$

where ρ has the units ohm \cdot meters ($\Omega \cdot \text{m}$). Because $R = \ell/\sigma A$, we can express the resistance of a uniform block of material along the length ℓ as

$$R = \rho \frac{\ell}{A} \quad (27.10)$$

Every ohmic material has a characteristic resistivity that depends on the properties of the material and on temperature. In addition, as you can see from Equation 27.10, the resistance of a sample of the material depends on the geometry of the sample as well as on the resistivity of the material. Table 27.2 (page 814) gives the resistivities of a variety of materials at 20°C . Notice the enormous range, from very low values for good conductors such as copper and silver to very high values for good insulators such as glass and rubber. An ideal conductor would have zero resistivity, and an ideal insulator would have infinite resistivity.

Equation 27.10 shows that the resistance of a given cylindrical conductor such as a wire is proportional to its length and inversely proportional to its cross-sectional area. If the length of a wire is doubled, its resistance doubles. If its cross-sectional area is doubled, its resistance decreases by one half. The situation is analogous to the flow of a liquid through a pipe. As the pipe's length is increased, the resistance to flow increases. As the pipe's cross-sectional area is increased, more liquid crosses a given cross section of the pipe per unit time interval. Therefore, more liquid flows for the same pressure differential applied to the pipe, and the resistance to flow decreases.

Ohmic materials and devices have a linear current–potential difference relationship over a broad range of applied potential differences (Fig. 27.7a, page 814). The slope of the I -versus- ΔV curve in the linear region yields a value for $1/R$. Nonohmic

The colored bands on this resistor are yellow, violet, black, and gold.




Figure 27.6 A close-up view of a circuit board shows the color coding on a resistor. The gold band on the left tells us that the resistor is oriented “backward” in this view and we need to read the colors from right to left.

◀ Resistivity is the inverse of conductivity

◀ Resistance of a uniform material along the length ℓ

Pitfall Prevention 27.4

Resistance and Resistivity Resistivity is a property of a *substance*, whereas resistance is a property of an *object*. We have seen similar pairs of variables before. For example, density is a property of a substance, whereas mass is a property of an object. Equation 27.10 relates resistance to resistivity, and Equation 1.1 relates mass to density.

²Do not confuse resistivity ρ with mass density or charge density, for which the same symbol is used.

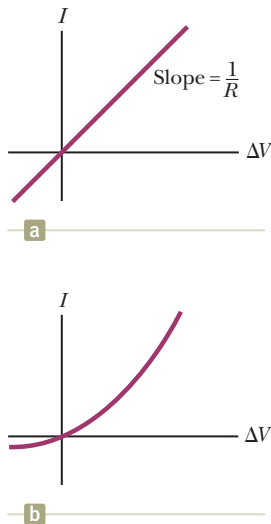


Figure 27.7 (a) The current–potential difference curve for an ohmic material. The curve is linear, and the slope is equal to the inverse of the resistance of the conductor. (b) A nonlinear current–potential difference curve for a junction diode. This device does not obey Ohm’s law.

Table 27.2 Resistivities and Temperature Coefficients of Resistivity for Various Materials

Material	Resistivity ^a ($\Omega \cdot \text{m}$)	Temperature Coefficient ^b α [$(^\circ\text{C})^{-1}$]
Silver	1.59×10^{-8}	3.8×10^{-3}
Copper	1.7×10^{-8}	3.9×10^{-3}
Gold	2.44×10^{-8}	3.4×10^{-3}
Aluminum	2.82×10^{-8}	3.9×10^{-3}
Tungsten	5.6×10^{-8}	4.5×10^{-3}
Iron	10×10^{-8}	5.0×10^{-3}
Platinum	11×10^{-8}	3.92×10^{-3}
Lead	22×10^{-8}	3.9×10^{-3}
Nichrome ^c	1.00×10^{-6}	0.4×10^{-3}
Carbon	3.5×10^{-5}	-0.5×10^{-3}
Germanium	0.46	-48×10^{-3}
Silicon ^d	2.3×10^3	-75×10^{-3}
Glass	10^{10} to 10^{14}	
Hard rubber	$\sim 10^{13}$	
Sulfur	10^{15}	
Quartz (fused)	75×10^{16}	

^a All values at 20°C . All elements in this table are assumed to be free of impurities.

^b See Section 27.4.

^c A nickel–chromium alloy commonly used in heating elements. The resistivity of Nichrome varies with composition and ranges between 1.00×10^{-6} and $1.50 \times 10^{-6} \Omega \cdot \text{m}$.

^d The resistivity of silicon is very sensitive to purity. The value can be changed by several orders of magnitude when it is doped with other atoms.

materials have a nonlinear current–potential difference relationship. One common semiconducting device with nonlinear I -versus- ΔV characteristics is the *junction diode* (Fig. 27.7b). The resistance of this device is low for currents in one direction (positive ΔV) and high for currents in the reverse direction (negative ΔV). In fact, most modern electronic devices, such as transistors, have nonlinear current–potential difference relationships; their proper operation depends on the particular way they violate Ohm’s law.

Quick Quiz 27.2 A cylindrical wire has a radius r and length ℓ . If both r and ℓ are doubled, does the resistance of the wire (a) increase, (b) decrease, or (c) remain the same?

Quick Quiz 27.3 In Figure 27.7b, as the applied voltage increases, does the resistance of the diode (a) increase, (b) decrease, or (c) remain the same?

Example 27.2 The Resistance of Nichrome Wire

The radius of 22-gauge Nichrome wire is 0.32 mm.

(A) Calculate the resistance per unit length of this wire.

SOLUTION

Conceptualize Table 27.2 shows that Nichrome has a resistivity two orders of magnitude larger than the best conductors in the table. Therefore, we expect it to have some special practical applications that the best conductors may not have.

Categorize We model the wire as a cylinder so that a simple geometric analysis can be applied to find the resistance.

Analyze Use Equation 27.10 and the resistivity of Nichrome from Table 27.2 to find the resistance per unit length:

$$\frac{R}{\ell} = \frac{\rho}{A} = \frac{\rho}{\pi r^2} = \frac{1.0 \times 10^{-6} \Omega \cdot \text{m}}{\pi(0.32 \times 10^{-3} \text{ m})^2} = 3.1 \Omega/\text{m}$$

27.2 continued

(B) If a potential difference of 10 V is maintained across a 1.0-m length of the Nichrome wire, what is the current in the wire?

SOLUTION

Analyze Use Equation 27.7 to find the current:

$$I = \frac{\Delta V}{R} = \frac{\Delta V}{(R/\ell)\ell} = \frac{10 \text{ V}}{(3.1 \Omega/\text{m})(1.0 \text{ m})} = 3.2 \text{ A}$$

Finalize Because of its high resistivity and resistance to oxidation, Nichrome is often used for heating elements in toasters, irons, and electric heaters.

WHAT IF? What if the wire were composed of copper instead of Nichrome? How would the values of the resistance per unit length and the current change?

Answer Table 27.2 shows us that copper has a resistivity two orders of magnitude smaller than that for Nichrome. Therefore, we expect the answer to part (A) to be smaller and the answer to part (B) to be larger. Calculations show that a copper wire of the same radius would have a resistance per unit length of only $0.053 \Omega/\text{m}$. A 1.0-m length of copper wire of the same radius would carry a current of 190 A with an applied potential difference of 10 V.

Example 27.3 The Radial Resistance of a Coaxial Cable

Coaxial cables are used extensively for cable television and other electronic applications. A coaxial cable consists of two concentric cylindrical conductors. The region between the conductors is completely filled with polyethylene plastic as shown in Figure 27.8a. Current leakage through the plastic, in the *radial* direction, is unwanted. (The cable is designed to conduct current along its length, but that is *not* the current being considered here.) The radius of the inner conductor is $a = 0.500 \text{ cm}$, the radius of the outer conductor is $b = 1.75 \text{ cm}$, and the length is $L = 15.0 \text{ cm}$. The resistivity of the plastic is $1.0 \times 10^{13} \Omega \cdot \text{m}$. Calculate the resistance of the plastic between the two conductors.

SOLUTION

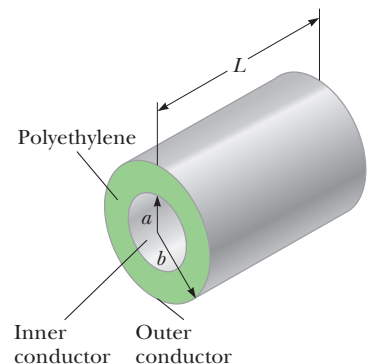
Conceptualize Imagine two currents as suggested in the text of the problem. The desired current is along the cable, carried within the conductors. The undesired current corresponds to leakage through the plastic, and its direction is radial.

Categorize Because the resistivity and the geometry of the plastic are known, we categorize this problem as one in which we find the resistance of the plastic from these parameters. Equation 27.10, however, represents the resistance of a block of material. We have a more complicated geometry in this situation. Because the area through which the charges pass depends on the radial position, we must use integral calculus to determine the answer.

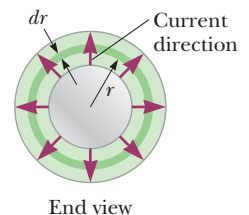
Analyze We divide the plastic into concentric cylindrical shells of infinitesimal thickness dr (Fig. 27.8b). Any charge passing from the inner to the outer conductor must move radially through this shell. Use a differential form of Equation 27.10, replacing ℓ with dr for the length variable: $dR = \rho dr/A$, where dR is the resistance of a shell of plastic of thickness dr and surface area A .

Write an expression for the resistance of our hollow cylindrical shell of plastic representing the area as the surface area of the shell:

$$dR = \frac{\rho dr}{A} = \frac{\rho}{2\pi rL} dr$$



a



End view

b

Figure 27.8 (Example 27.3) A coaxial cable. (a) Polyethylene plastic fills the gap between the two conductors. (b) End view, showing current leakage.

continued

▶ 27.3 continued

Integrate this expression from $r = a$ to $r = b$:

$$(1) \quad R = \int dR = \frac{\rho}{2\pi L} \int_a^b \frac{dr}{r} = \frac{\rho}{2\pi L} \ln\left(\frac{b}{a}\right)$$

Substitute the values given:

$$R = \frac{1.0 \times 10^{13} \Omega \cdot \text{m}}{2\pi(0.150 \text{ m})} \ln\left(\frac{1.75 \text{ cm}}{0.500 \text{ cm}}\right) = 1.33 \times 10^{13} \Omega$$

Finalize Let's compare this resistance to that of the inner copper conductor of the cable along the 15.0-cm length.

Use Equation 27.10 to find the resistance of the copper cylinder:

$$\begin{aligned} R_{\text{Cu}} &= \rho \frac{\ell}{A} = (1.7 \times 10^{-8} \Omega \cdot \text{m}) \left[\frac{0.150 \text{ m}}{\pi(5.00 \times 10^{-3} \text{ m})^2} \right] \\ &= 3.2 \times 10^{-5} \Omega \end{aligned}$$

This resistance is 18 orders of magnitude smaller than the radial resistance. Therefore, almost all the current corresponds to charge moving along the length of the cable, with a very small fraction leaking in the radial direction.

WHAT IF? Suppose the coaxial cable is enlarged to twice the overall diameter with two possible choices: (1) the ratio b/a is held fixed, or (2) the difference $b - a$ is held fixed. For which choice does the leakage current between the inner and outer conductors increase when the voltage is applied between them?

Answer For the current to increase, the resistance must decrease. For choice (1), in which b/a is held fixed, Equa-

tion (1) shows that the resistance is unaffected. For choice (2), we do not have an equation involving the difference $b - a$ to inspect. Looking at Figure 27.8b, however, we see that increasing b and a while holding the difference constant results in charge flowing through the same thickness of plastic but through a larger area perpendicular to the flow. This larger area results in lower resistance and a higher current.

27.3 A Model for Electrical Conduction

In this section, we describe a structural model of electrical conduction in metals that was first proposed by Paul Drude (1863–1906) in 1900. (See Section 21.1 for a review of structural models.) This model leads to Ohm's law and shows that resistivity can be related to the motion of electrons in metals. Although the Drude model described here has limitations, it introduces concepts that are applied in more elaborate treatments.

Following the outline of structural models from Section 21.1, the Drude model for electrical conduction has the following properties:

1. *Physical components:*

Consider a conductor as a regular array of atoms plus a collection of free electrons, which are sometimes called *conduction* electrons. We identify the system as the combination of the atoms and the conduction electrons. The conduction electrons, although bound to their respective atoms when the atoms are not part of a solid, become free when the atoms condense into a solid.

2. *Behavior of the components:*

- In the absence of an electric field, the conduction electrons move in random directions through the conductor (Fig. 27.3a). The situation is similar to the motion of gas molecules confined in a vessel. In fact, some scientists refer to conduction electrons in a metal as an *electron gas*.
- When an electric field is applied to the system, the free electrons drift slowly in a direction opposite that of the electric field (Fig. 27.3b), with an average drift speed v_d that is much smaller (typically 10^{-4} m/s) than their average speed v_{avg} between collisions (typically 10^6 m/s).
- The electron's motion after a collision is independent of its motion before the collision. The excess energy acquired by the electrons due to

the work done on them by the electric field is transferred to the atoms of the conductor when the electrons and atoms collide.

With regard to property 2(c) above, the energy transferred to the atoms causes the internal energy of the system and, therefore, the temperature of the conductor to increase.

We are now in a position to derive an expression for the drift velocity, using several of our analysis models. When a free electron of mass m_e and charge $q (= -e)$ is subjected to an electric field $\vec{\mathbf{E}}$, it is described by the particle in a field model and experiences a force $\vec{\mathbf{F}} = q\vec{\mathbf{E}}$. The electron is a particle under a net force, and its acceleration can be found from Newton's second law, $\Sigma \vec{\mathbf{F}} = m\vec{\mathbf{a}}$:

$$\vec{\mathbf{a}} = \frac{\Sigma \vec{\mathbf{F}}}{m} = \frac{q\vec{\mathbf{E}}}{m_e} \quad (27.11)$$

Because the electric field is uniform, the electron's acceleration is constant, so the electron can be modeled as a particle under constant acceleration. If $\vec{\mathbf{v}}_i$ is the electron's initial velocity the instant after a collision (which occurs at a time defined as $t = 0$), the velocity of the electron at a very short time t later (immediately before the next collision occurs) is, from Equation 4.8,

$$\vec{\mathbf{v}}_f = \vec{\mathbf{v}}_i + \vec{\mathbf{a}}t = \vec{\mathbf{v}}_i + \frac{q\vec{\mathbf{E}}}{m_e} t \quad (27.12)$$

Let's now take the average value of $\vec{\mathbf{v}}_f$ for all the electrons in the wire over all possible collision times t and all possible values of $\vec{\mathbf{v}}_i$. Assuming the initial velocities are randomly distributed over all possible directions (property 2(a) above), the average value of $\vec{\mathbf{v}}_i$ is zero. The average value of the second term of Equation 27.12 is $(q\vec{\mathbf{E}}/m_e)\tau$, where τ is the *average time interval between successive collisions*. Because the average value of $\vec{\mathbf{v}}_f$ is equal to the drift velocity,

$$\vec{\mathbf{v}}_{f,\text{avg}} = \vec{\mathbf{v}}_d = \frac{q\vec{\mathbf{E}}}{m_e} \tau \quad (27.13)$$

◀ Drift velocity in terms of microscopic quantities

The value of τ depends on the size of the metal atoms and the number of electrons per unit volume. We can relate this expression for drift velocity in Equation 27.13 to the current in the conductor. Substituting the magnitude of the velocity from Equation 27.13 into Equation 27.4, the average current in the conductor is given by

$$I_{\text{avg}} = nq \left(\frac{qE}{m_e} \tau \right) A = \frac{nq^2 E}{m_e} \tau A \quad (27.14)$$

Because the current density J is the current divided by the area A ,

$$J = \frac{nq^2 E}{m_e} \tau$$

◀ Current density in terms of microscopic quantities

where n is the number of electrons per unit volume. Comparing this expression with Ohm's law, $J = \sigma E$, we obtain the following relationships for conductivity and resistivity of a conductor:

$$\sigma = \frac{nq^2 \tau}{m_e} \quad (27.15)$$

◀ Conductivity in terms of microscopic quantities

$$\rho = \frac{1}{\sigma} = \frac{m_e}{nq^2 \tau} \quad (27.16)$$

◀ Resistivity in terms of microscopic quantities

According to this classical model, conductivity and resistivity do not depend on the strength of the electric field. This feature is characteristic of a conductor obeying Ohm's law.

The model shows that the resistivity can be calculated from a knowledge of the density of the electrons, their charge and mass, and the average time interval τ between collisions. This time interval is related to the average distance between collisions ℓ_{avg} (the *mean free path*) and the average speed v_{avg} through the expression³

$$\tau = \frac{\ell_{\text{avg}}}{v_{\text{avg}}} \quad (27.17)$$

Although this structural model of conduction is consistent with Ohm's law, it does not correctly predict the values of resistivity or the behavior of the resistivity with temperature. For example, the results of classical calculations for v_{avg} using the ideal gas model for the electrons are about a factor of ten smaller than the actual values, which results in incorrect predictions of values of resistivity from Equation 27.16. Furthermore, according to Equations 27.16 and 27.17, the resistivity is predicted to vary with temperature as does v_{avg} , which, according to an ideal-gas model (Chapter 21, Eq. 21.43), is proportional to \sqrt{T} . This behavior is in disagreement with the experimentally observed linear dependence of resistivity with temperature for pure metals. (See Section 27.4.) Because of these incorrect predictions, we must modify our structural model. We shall call the model that we have developed so far the *classical* model for electrical conduction. To account for the incorrect predictions of the classical model, we develop it further into a *quantum mechanical* model, which we shall describe briefly.

We discussed two important simplification models in earlier chapters, the particle model and the wave model. Although we discussed these two simplification models separately, quantum physics tells us that this separation is not so clear-cut. As we shall discuss in detail in Chapter 40, particles have wave-like properties. The predictions of some models can only be matched to experimental results if the model includes the wave-like behavior of particles. The structural model for electrical conduction in metals is one of these cases.

Let us imagine that the electrons moving through the metal have wave-like properties. If the array of atoms in a conductor is regularly spaced (that is, periodic), the wave-like character of the electrons makes it possible for them to move freely through the conductor and a collision with an atom is unlikely. For an idealized conductor, no collisions would occur, the mean free path would be infinite, and the resistivity would be zero. Electrons are scattered only if the atomic arrangement is irregular (not periodic), as a result of structural defects or impurities, for example. At low temperatures, the resistivity of metals is dominated by scattering caused by collisions between the electrons and impurities. At high temperatures, the resistivity is dominated by scattering caused by collisions between the electrons and the atoms of the conductor, which are continuously displaced as a result of thermal agitation, destroying the perfect periodicity. The thermal motion of the atoms makes the structure irregular (compared with an atomic array at rest), thereby reducing the electron's mean free path.

Although it is beyond the scope of this text to show this modification in detail, the classical model modified with the wave-like character of the electrons results in predictions of resistivity values that are in agreement with measured values and predicts a linear temperature dependence. Quantum notions had to be introduced in Chapter 21 to understand the temperature behavior of molar specific heats of gases. Here we have another case in which quantum physics is necessary for the model to agree with experiment. Although classical physics can explain a tremendous range of phenomena, we continue to see hints that quantum physics must be incorporated into our models. We shall study quantum physics in detail in Chapters 40 through 46.

³Recall that the average speed of a group of particles depends on the temperature of the group (Chapter 21) and is not the same as the drift speed v_d .

27.4 Resistance and Temperature

Over a limited temperature range, the resistivity of a conductor varies approximately linearly with temperature according to the expression

$$\rho = \rho_0[1 + \alpha(T - T_0)] \quad (27.18)$$

where ρ is the resistivity at some temperature T (in degrees Celsius), ρ_0 is the resistivity at some reference temperature T_0 (usually taken to be 20°C), and α is the **temperature coefficient of resistivity**. From Equation 27.18, the temperature coefficient of resistivity can be expressed as

$$\alpha = \frac{1}{\rho_0} \frac{\Delta\rho}{\Delta T} \quad (27.19)$$

where $\Delta\rho = \rho - \rho_0$ is the change in resistivity in the temperature interval $\Delta T = T - T_0$.

The temperature coefficients of resistivity for various materials are given in Table 27.2. Notice that the unit for α is degrees Celsius⁻¹ [$(^\circ\text{C})^{-1}$]. Because resistance is proportional to resistivity (Eq. 27.10), the variation of resistance of a sample is

$$R = R_0[1 + \alpha(T - T_0)] \quad (27.20)$$

where R_0 is the resistance at temperature T_0 . Use of this property enables precise temperature measurements through careful monitoring of the resistance of a probe made from a particular material.

For some metals such as copper, resistivity is nearly proportional to temperature as shown in Figure 27.9. A nonlinear region always exists at very low temperatures, however, and the resistivity usually reaches some finite value as the temperature approaches absolute zero. This residual resistivity near absolute zero is caused primarily by the collision of electrons with impurities and imperfections in the metal. In contrast, high-temperature resistivity (the linear region) is predominantly characterized by collisions between electrons and metal atoms.

Notice that three of the α values in Table 27.2 are negative, indicating that the resistivity of these materials decreases with increasing temperature. This behavior is indicative of a class of materials called *semiconductors*, first introduced in Section 23.2, and is due to an increase in the density of charge carriers at higher temperatures.

Because the charge carriers in a semiconductor are often associated with impurity atoms (as we discuss in more detail in Chapter 43), the resistivity of these materials is very sensitive to the type and concentration of such impurities.

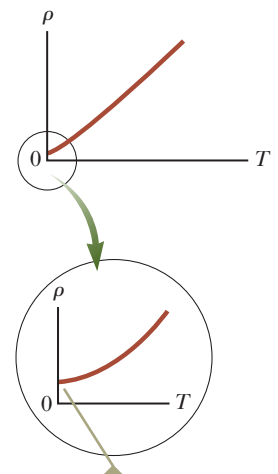
Quick Quiz 27.4 When does an incandescent lightbulb carry more current, (a) immediately after it is turned on and the glow of the metal filament is increasing or (b) after it has been on for a few milliseconds and the glow is steady?

27.5 Superconductors

There is a class of metals and compounds whose resistance decreases to zero when they are below a certain temperature T_c , known as the **critical temperature**. These materials are known as **superconductors**. The resistance–temperature graph for a superconductor follows that of a normal metal at temperatures above T_c (Fig. 27.10). When the temperature is at or below T_c , the resistivity drops suddenly to zero. This phenomenon was discovered in 1911 by Dutch physicist Heike Kamerlingh-Onnes (1853–1926) as he worked with mercury, which is a superconductor below 4.2 K. Measurements have shown that the resistivities of superconductors below their T_c values are less than $4 \times 10^{-25} \Omega \cdot \text{m}$, or approximately 10^{17} times smaller than the resistivity of copper. In practice, these resistivities are considered to be zero.

◀ Variation of ρ with temperature

◀ Temperature coefficient of resistivity



As T approaches absolute zero, the resistivity approaches a nonzero value.

Figure 27.9 Resistivity versus temperature for a metal such as copper. The curve is linear over a wide range of temperatures, and ρ increases with increasing temperature.

The resistance drops discontinuously to zero at T_c , which is 4.15 K for mercury.

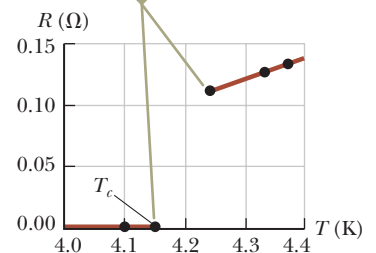


Figure 27.10 Resistance versus temperature for a sample of mercury (Hg). The graph follows that of a normal metal above the critical temperature T_c .



Courtesy of IBM Research Laboratory

A small permanent magnet levitated above a disk of the superconductor $\text{YBa}_2\text{Cu}_3\text{O}_7$, which is in liquid nitrogen at 77 K.

Table 27.3 Critical Temperatures for Various Superconductors

Material	T_c (K)
$\text{HgBa}_2\text{Ca}_2\text{Cu}_3\text{O}_8$	134
Tl—Ba—Ca—Cu—O	125
Bi—Sr—Ca—Cu—O	105
$\text{YBa}_2\text{Cu}_3\text{O}_7$	92
Nb_3Ge	23.2
Nb_3Sn	18.05
Nb	9.46
Pb	7.18
Hg	4.15
Sn	3.72
Al	1.19
Zn	0.88

Today, thousands of superconductors are known, and as Table 27.3 illustrates, the critical temperatures of recently discovered superconductors are substantially higher than initially thought possible. Two kinds of superconductors are recognized. The more recently identified ones are essentially ceramics with high critical temperatures, whereas superconducting materials such as those observed by Kamerlingh-Onnes are metals. If a room-temperature superconductor is ever identified, its effect on technology could be tremendous.

The value of T_c is sensitive to chemical composition, pressure, and molecular structure. Copper, silver, and gold, which are excellent conductors, do not exhibit superconductivity.

One truly remarkable feature of superconductors is that once a current is set up in them, it persists *without any applied potential difference* (because $R = 0$). Steady currents have been observed to persist in superconducting loops for several years with no apparent decay!

An important and useful application of superconductivity is in the development of superconducting magnets, in which the magnitudes of the magnetic field are approximately ten times greater than those produced by the best normal electromagnets. Such superconducting magnets are being considered as a means of storing energy. Superconducting magnets are currently used in medical magnetic resonance imaging, or MRI, units, which produce high-quality images of internal organs without the need for excessive exposure of patients to x-rays or other harmful radiation.

27.6 Electrical Power

In typical electric circuits, energy T_{ET} is transferred by electrical transmission from a source such as a battery to some device such as a lightbulb or a radio receiver. Let's determine an expression that will allow us to calculate the rate of this energy transfer. First, consider the simple circuit in Figure 27.11, where energy is delivered to a resistor. (Resistors are designated by the circuit symbol $\text{---}\text{---}\text{---}$.) Because the connecting wires also have resistance, some energy is delivered to the wires and some to the resistor. Unless noted otherwise, we shall assume the resistance of the wires is small compared with the resistance of the circuit element so that the energy delivered to the wires is negligible.

Imagine following a positive quantity of charge Q moving clockwise around the circuit in Figure 27.11 from point a through the battery and resistor back to point a . We identify the entire circuit as our system. As the charge moves from a to b through the battery, the electric potential energy of the system *increases* by an amount $Q\Delta V$

The direction of the effective flow of positive charge is clockwise.

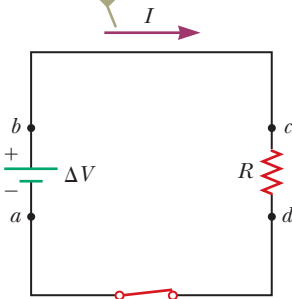


Figure 27.11 A circuit consisting of a resistor of resistance R and a battery having a potential difference ΔV across its terminals.

while the chemical potential energy in the battery *decreases* by the same amount. (Recall from Eq. 25.3 that $\Delta U = q\Delta V$.) As the charge moves from *c* to *d* through the resistor, however, the electric potential energy of the system decreases due to collisions of electrons with atoms in the resistor. In this process, the electric potential energy is transformed to internal energy corresponding to increased vibrational motion of the atoms in the resistor. Because the resistance of the interconnecting wires is neglected, no energy transformation occurs for paths *bc* and *da*. When the charge returns to point *a*, the net result is that some of the chemical potential energy in the battery has been delivered to the resistor and resides in the resistor as internal energy E_{int} associated with molecular vibration.

The resistor is normally in contact with air, so its increased temperature results in a transfer of energy by heat Q into the air. In addition, the resistor emits thermal radiation T_{ER} , representing another means of escape for the energy. After some time interval has passed, the resistor reaches a constant temperature. At this time, the input of energy from the battery is balanced by the output of energy from the resistor by heat and radiation, and the resistor is a nonisolated system in steady state. Some electrical devices include *heat sinks*⁴ connected to parts of the circuit to prevent these parts from reaching dangerously high temperatures. Heat sinks are pieces of metal with many fins. Because the metal's high thermal conductivity provides a rapid transfer of energy by heat away from the hot component and the large number of fins provides a large surface area in contact with the air, energy can transfer by radiation and into the air by heat at a high rate.

Let's now investigate the rate at which the electric potential energy of the system decreases as the charge Q passes through the resistor:

$$\frac{dU}{dt} = \frac{d}{dt}(Q\Delta V) = \frac{dQ}{dt}\Delta V = I\Delta V$$

where I is the current in the circuit. The system regains this potential energy when the charge passes through the battery, at the expense of chemical energy in the battery. The rate at which the potential energy of the system decreases as the charge passes through the resistor is equal to the rate at which the system gains internal energy in the resistor. Therefore, the power P , representing the rate at which energy is delivered to the resistor, is

$$P = I\Delta V \quad (27.21)$$

We derived this result by considering a battery delivering energy to a resistor. Equation 27.21, however, can be used to calculate the power delivered by a voltage source to *any* device carrying a current I and having a potential difference ΔV between its terminals.

Using Equation 27.21 and $\Delta V = IR$ for a resistor, we can express the power delivered to the resistor in the alternative forms

$$P = I^2R = \frac{(\Delta V)^2}{R} \quad (27.22)$$

When I is expressed in amperes, ΔV in volts, and R in ohms, the SI unit of power is the watt, as it was in Chapter 8 in our discussion of mechanical power. The process by which energy is transformed to internal energy in a conductor of resistance R is often called *joule heating*;⁵ this transformation is also often referred to as an I^2R loss.

Pitfall Prevention 27.5

Charges Do Not Move All the Way Around a Circuit in a Short Time

In terms of understanding the energy transfer in a circuit, it is useful to *imagine* a charge moving all the way around the circuit even though it would take hours to do so.

Pitfall Prevention 27.6

Misconceptions About Current

Several common misconceptions are associated with current in a circuit like that in Figure 27.11. One is that current comes out of one terminal of the battery and is then "used up" as it passes through the resistor, leaving current in only one part of the circuit. The current is actually the same *everywhere* in the circuit. A related misconception has the current coming out of the resistor being smaller than that going in because some of the current is "used up." Yet another misconception has current coming out of both terminals of the battery, in opposite directions, and then "clashing" in the resistor, delivering the energy in this manner. That is not the case; charges flow in the same rotational sense at *all* points in the circuit.

Pitfall Prevention 27.7

Energy Is Not "Dissipated" In some books, you may see Equation 27.22 described as the power "dissipated in" a resistor, suggesting that energy disappears. Instead, we say energy is "delivered to" a resistor.

⁴This usage is another misuse of the word *heat* that is ingrained in our common language.

⁵It is commonly called *joule heating* even though the process of heat does not occur when energy delivered to a resistor appears as internal energy. It is another example of incorrect usage of the word *heat* that has become entrenched in our language.

Figure 27.12 These power lines transfer energy from the electric company to homes and businesses. The energy is transferred at a very high voltage, possibly hundreds of thousands of volts in some cases. Even though it makes power lines very dangerous, the high voltage results in less loss of energy due to resistance in the wires.



When transporting energy by electricity through power lines (Fig. 27.12), you should not assume the lines have zero resistance. Real power lines do indeed have resistance, and power is delivered to the resistance of these wires. Utility companies seek to minimize the energy transformed to internal energy in the lines and maximize the energy delivered to the consumer. Because $P = I\Delta V$, the same amount of energy can be transported either at high currents and low potential differences or at low currents and high potential differences. Utility companies choose to transport energy at low currents and high potential differences primarily for economic reasons. Copper wire is very expensive, so it is cheaper to use high-resistance wire (that is, wire having a small cross-sectional area; see Eq. 27.10). Therefore, in the expression for the power delivered to a resistor, $P = I^2R$, the resistance of the wire is fixed at a relatively high value for economic considerations. The I^2R loss can be reduced by keeping the current I as low as possible, which means transferring the energy at a high voltage. In some instances, power is transported at potential differences as great as 765 kV. At the destination of the energy, the potential difference is usually reduced to 4 kV by a device called a *transformer*. Another transformer drops the potential difference to 240 V for use in your home. Of course, each time the potential difference decreases, the current increases by the same factor and the power remains the same. We shall discuss transformers in greater detail in Chapter 33.

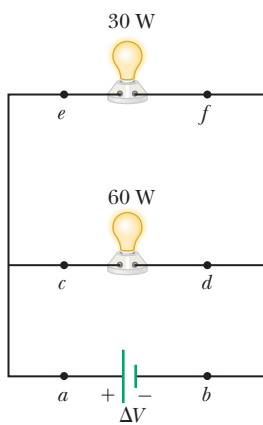


Figure 27.13 (Quick Quiz 27.5) Two lightbulbs connected across the same potential difference.

Quick Quiz 27.5 For the two lightbulbs shown in Figure 27.13, rank the current values at points a through f from greatest to least.

Example 27.4 Power in an Electric Heater

An electric heater is constructed by applying a potential difference of 120 V across a Nichrome wire that has a total resistance of $8.00\ \Omega$. Find the current carried by the wire and the power rating of the heater.

SOLUTION

Conceptualize As discussed in Example 27.2, Nichrome wire has high resistivity and is often used for heating elements in toasters, irons, and electric heaters. Therefore, we expect the power delivered to the wire to be relatively high.

Categorize We evaluate the power from Equation 27.22, so we categorize this example as a substitution problem.

Use Equation 27.7 to find the current in the wire:
$$I = \frac{\Delta V}{R} = \frac{120\ \text{V}}{8.00\ \Omega} = 15.0\ \text{A}$$

Find the power rating using the expression $P = I^2R$ from Equation 27.22:
$$P = I^2R = (15.0\ \text{A})^2(8.00\ \Omega) = 1.80 \times 10^3\ \text{W} = 1.80\ \text{kW}$$

WHAT IF? What if the heater were accidentally connected to a 240-V supply? (That is difficult to do because the shape and orientation of the metal contacts in 240-V plugs are different from those in 120-V plugs.) How would that affect the current carried by the heater and the power rating of the heater, assuming the resistance remains constant?

Answer If the applied potential difference were doubled, Equation 27.7 shows that the current would double. According to Equation 27.22, $P = (\Delta V)^2/R$, the power would be four times larger.

Example 27.5 Linking Electricity and Thermodynamics AM

An immersion heater must increase the temperature of 1.50 kg of water from 10.0°C to 50.0°C in 10.0 min while operating at 110 V.

(A) What is the required resistance of the heater?

SOLUTION

Conceptualize An immersion heater is a resistor that is inserted into a container of water. As energy is delivered to the immersion heater, raising its temperature, energy leaves the surface of the resistor by heat, going into the water. When the immersion heater reaches a constant temperature, the rate of energy delivered to the resistance by electrical transmission (T_{ET}) is equal to the rate of energy delivered by heat (Q) to the water.

Categorize This example allows us to link our new understanding of power in electricity with our experience with specific heat in thermodynamics (Chapter 20). The water is a *nonisolated system*. Its internal energy is rising because of energy transferred into the water by heat from the resistor, so Equation 8.2 reduces to $\Delta E_{\text{int}} = Q$. In our model, we assume the energy that enters the water from the heater remains in the water.

Analyze To simplify the analysis, let's ignore the initial period during which the temperature of the resistor increases and also ignore any variation of resistance with temperature. Therefore, we imagine a constant rate of energy transfer for the entire 10.0 min.

Set the rate of energy delivered to the resistor equal to the rate of energy Q entering the water by heat:

$$P = \frac{(\Delta V)^2}{R} = \frac{Q}{\Delta t}$$

Use Equation 20.4, $Q = mc \Delta T$, to relate the energy input by heat to the resulting temperature change of the water and solve for the resistance:

$$\frac{(\Delta V)^2}{R} = \frac{mc \Delta T}{\Delta t} \rightarrow R = \frac{(\Delta V)^2 \Delta t}{mc \Delta T}$$

Substitute the values given in the statement of the problem:

$$R = \frac{(110 \text{ V})^2(600 \text{ s})}{(1.50 \text{ kg})(4186 \text{ J/kg} \cdot ^\circ\text{C})(50.0^\circ\text{C} - 10.0^\circ\text{C})} = 28.9 \Omega$$

(B) Estimate the cost of heating the water.

SOLUTION

Multiply the power by the time interval to find the amount of energy transferred to the resistor:

$$T_{\text{ET}} = P \Delta t = \frac{(\Delta V)^2}{R} \Delta t = \frac{(110 \text{ V})^2}{28.9 \Omega} (10.0 \text{ min}) \left(\frac{1 \text{ h}}{60.0 \text{ min}} \right) \\ = 69.8 \text{ Wh} = 0.0698 \text{ kWh}$$

Find the cost knowing that energy is purchased at an estimated price of 11¢ per kilowatt-hour:

$$\text{Cost} = (0.0698 \text{ kWh})(\$0.11/\text{kWh}) = \$0.008 = 0.8\text{¢}$$

Finalize The cost to heat the water is very low, less than one cent. In reality, the cost is higher because some energy is transferred from the water into the surroundings by heat and electromagnetic radiation while its temperature is increasing. If you have electrical devices in your home with power ratings on them, use this power rating and an approximate time interval of use to estimate the cost for one use of the device.

Summary

Definitions

The electric **current** I in a conductor is defined as

$$I \equiv \frac{dQ}{dt} \quad (27.2)$$

where dQ is the charge that passes through a cross section of the conductor in a time interval dt . The SI unit of current is the **ampere** (A), where 1 A = 1 C/s.

continued

The **current density** J in a conductor is the current per unit area:

$$J \equiv \frac{I}{A} \quad (27.5)$$

The **resistance** R of a conductor is defined as

$$R \equiv \frac{\Delta V}{I} \quad (27.7)$$

where ΔV is the potential difference across the conductor and I is the current it carries. The SI unit of resistance is volts per ampere, which is defined to be 1 **ohm** (Ω); that is, $1 \Omega = 1 \text{ V/A}$.

Concepts and Principles

The average current in a conductor is related to the motion of the charge carriers through the relationship

$$I_{\text{avg}} = nqv_d A \quad (27.4)$$

where n is the density of charge carriers, q is the charge on each carrier, v_d is the drift speed, and A is the cross-sectional area of the conductor.

The current density in an ohmic conductor is proportional to the electric field according to the expression

$$J = \sigma E \quad (27.6)$$

The proportionality constant σ is called the **conductivity** of the material of which the conductor is made. The inverse of σ is known as **resistivity** ρ (that is, $\rho = 1/\sigma$). Equation 27.6 is known as **Ohm's law**, and a material is said to obey this law if the ratio of its current density to its applied electric field is a constant that is independent of the applied field.

For a uniform block of material of cross-sectional area A and length ℓ , the resistance over the length ℓ is

$$R = \rho \frac{\ell}{A} \quad (27.10)$$

where ρ is the resistivity of the material.

In a classical model of electrical conduction in metals, the electrons are treated as molecules of a gas. In the absence of an electric field, the average velocity of the electrons is zero. When an electric field is applied, the electrons move (on average) with a **drift velocity** \vec{v}_d that is opposite the electric field. The drift velocity is given by

$$\vec{v}_d = \frac{q\vec{E}}{m_e} \tau \quad (27.13)$$

where q is the electron's charge, m_e is the mass of the electron, and τ is the average time interval between electron-atom collisions. According to this model, the resistivity of the metal is

$$\rho = \frac{m_e}{nq^2\tau} \quad (27.16)$$

where n is the number of free electrons per unit volume.

The resistivity of a conductor varies approximately linearly with temperature according to the expression

$$\rho = \rho_0[1 + \alpha(T - T_0)] \quad (27.18)$$

where ρ_0 is the resistivity at some reference temperature T_0 and α is the **temperature coefficient of resistivity**.

If a potential difference ΔV is maintained across a circuit element, the **power**, or rate at which energy is supplied to the element, is

$$P = I\Delta V \quad (27.21)$$

Because the potential difference across a resistor is given by $\Delta V = IR$, we can express the power delivered to a resistor as

$$P = I^2 R = \frac{(\Delta V)^2}{R} \quad (27.22)$$

The energy delivered to a resistor by electrical transmission T_{ET} appears in the form of internal energy E_{int} in the resistor.

Objective Questions

1. denotes answer available in *Student Solutions Manual/Study Guide*

- Car batteries are often rated in ampere-hours. Does this information designate the amount of (a) current, (b) power, (c) energy, (d) charge, or (e) potential the battery can supply?
- Two wires A and B with circular cross sections are made of the same metal and have equal lengths, but the resistance of wire A is three times greater than that of wire B. (i) What is the ratio of the cross-sectional

- area of A to that of B? (a) 3 (b) $\sqrt{3}$ (c) 1 (d) $1/\sqrt{3}$ (e) $\frac{1}{3}$ (ii) What is the ratio of the radius of A to that of B? Choose from the same possibilities as in part (i).
- A cylindrical metal wire at room temperature is carrying electric current between its ends. One end is at potential $V_A = 50$ V, and the other end is at potential $V_B = 0$ V. Rank the following actions in terms of the change that each one separately would produce in the current from the greatest increase to the greatest decrease. In your ranking, note any cases of equality. (a) Make $V_A = 150$ V with $V_B = 0$ V. (b) Adjust V_A to triple the power with which the wire converts electrically transmitted energy into internal energy. (c) Double the radius of the wire. (d) Double the length of the wire. (e) Double the Celsius temperature of the wire.
 - A current-carrying ohmic metal wire has a cross-sectional area that gradually becomes smaller from one end of the wire to the other. The current has the same value for each section of the wire, so charge does not accumulate at any one point. (i) How does the drift speed vary along the wire as the area becomes smaller? (a) It increases. (b) It decreases. (c) It remains constant. (ii) How does the resistance per unit length vary along the wire as the area becomes smaller? Choose from the same possibilities as in part (i).
 - A potential difference of 1.00 V is maintained across a 10.0- Ω resistor for a period of 20.0 s. What total charge passes by a point in one of the wires connected to the resistor in this time interval? (a) 200 C (b) 20.0 C (c) 2.00 C (d) 0.005 00 C (e) 0.050 0 C
 - Three wires are made of copper having circular cross sections. Wire 1 has a length L and radius r . Wire 2 has a length L and radius $2r$. Wire 3 has a length $2L$ and radius $3r$. Which wire has the smallest resistance? (a) wire 1 (b) wire 2 (c) wire 3 (d) All have the same resistance. (e) Not enough information is given to answer the question.
 - A metal wire of resistance R is cut into three equal pieces that are then placed together side by side to form a new cable with a length equal to one-third the original length. What is the resistance of this new cable? (a) $\frac{1}{9}R$ (b) $\frac{1}{3}R$ (c) R (d) $3R$ (e) $9R$
 - A metal wire has a resistance of 10.0 Ω at a temperature of 20.0°C. If the same wire has a resistance of 10.6 Ω at 90.0°C, what is the resistance of this wire when its temperature is -20.0°C? (a) 0.700 Ω (b) 9.66 Ω (c) 10.3 Ω (d) 13.8 Ω (e) 6.59 Ω
 - The current-versus-voltage behavior of a certain electrical device is shown in Figure OQ27.9. When the potential difference across the device is 2 V, what is its resistance? (a) 1 Ω (b) $\frac{3}{4}$ Ω (c) $\frac{4}{3}$ Ω (d) undefined (e) none of those answers
 - Two conductors made of the same material are connected across the same potential difference. Conductor A has twice the diameter and twice the length of conductor B. What is the ratio of the power delivered to A to the power delivered to B? (a) 8 (b) 4 (c) 2 (d) 1 (e) $\frac{1}{2}$
 - Two conducting wires A and B of the same length and radius are connected across the same potential difference. Conductor A has twice the resistivity of conductor B. What is the ratio of the power delivered to A to the power delivered to B? (a) 2 (b) $\sqrt{2}$ (c) 1 (d) $1/\sqrt{2}$ (e) $\frac{1}{2}$
 - Two lightbulbs both operate on 120 V. One has a power of 25 W and the other 100 W. (i) Which lightbulb has higher resistance? (a) The dim 25-W lightbulb does. (b) The bright 100-W lightbulb does. (c) Both are the same. (ii) Which lightbulb carries more current? Choose from the same possibilities as in part (i).
 - Wire B has twice the length and twice the radius of wire A. Both wires are made from the same material. If wire A has a resistance R , what is the resistance of wire B? (a) $4R$ (b) $2R$ (c) R (d) $\frac{1}{2}R$ (e) $\frac{1}{4}R$

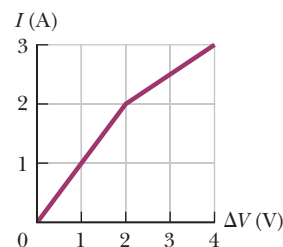


Figure OQ27.9

Conceptual Questions

1. denotes answer available in *Student Solutions Manual/Study Guide*

- If you were to design an electric heater using Nichrome wire as the heating element, what parameters of the wire could you vary to meet a specific power output such as 1 000 W?
- What factors affect the resistance of a conductor?
- When the potential difference across a certain conductor is doubled, the current is observed to increase by a factor of 3. What can you conclude about the conductor?
- Over the time interval after a difference in potential is applied between the ends of a wire, what would happen to the drift velocity of the electrons in a wire and to the current in the wire if the electrons could move freely without resistance through the wire?
- How does the resistance for copper and for silicon change with temperature? Why are the behaviors of these two materials different?
- Use the atomic theory of matter to explain why the resistance of a material should increase as its temperature increases.
- If charges flow very slowly through a metal, why does it not require several hours for a light to come on when you throw a switch?
- Newspaper articles often contain statements such as "10 000 volts of electricity surged through the victim's body." What is wrong with this statement?

Problems

WebAssign The problems found in this chapter may be assigned online in Enhanced WebAssign

1. straightforward; 2. intermediate; 3. challenging

1. full solution available in the *Student Solutions Manual/Study Guide*

AMT Analysis Model tutorial available in Enhanced WebAssign

GP Guided Problem

M Master It tutorial available in Enhanced WebAssign

W Watch It video solution available in Enhanced WebAssign

Section 27.1 Electric Current

AMT 1. A 200-km-long high-voltage transmission line 2.00 cm in diameter carries a steady current of 1 000 A. If the conductor is copper with a free charge density of 8.50×10^{28} electrons per cubic meter, how many years does it take one electron to travel the full length of the cable?

M 2. A small sphere that carries a charge q is whirled in a circle at the end of an insulating string. The angular frequency of revolution is ω . What average current does this revolving charge represent?

W 3. An aluminum wire having a cross-sectional area equal to $4.00 \times 10^{-6} \text{ m}^2$ carries a current of 5.00 A. The density of aluminum is 2.70 g/cm^3 . Assume each aluminum atom supplies one conduction electron per atom. Find the drift speed of the electrons in the wire.

AMT 4. In the Bohr model of the hydrogen atom (which will be covered in detail in Chapter 42), an electron in the lowest energy state moves at a speed of $2.19 \times 10^6 \text{ m/s}$ in a circular path of radius $5.29 \times 10^{-11} \text{ m}$. What is the effective current associated with this orbiting electron?

5. A proton beam in an accelerator carries a current of $125 \mu\text{A}$. If the beam is incident on a target, how many protons strike the target in a period of 23.0 s?

6. A copper wire has a circular cross section with a radius of 1.25 mm. (a) If the wire carries a current of 3.70 A, find the drift speed of the electrons in this wire. (b) All other things being equal, what happens to the drift speed in wires made of metal having a larger number of conduction electrons per atom than copper? Explain.

7. Suppose the current in a conductor decreases exponentially with time according to the equation $I(t) = I_0 e^{-t/\tau}$, where I_0 is the initial current (at $t = 0$) and τ is a constant having dimensions of time. Consider a fixed observation point within the conductor. (a) How much charge passes this point between $t = 0$ and $t = \tau$? (b) How much charge passes this point between $t = 0$ and $t = 10\tau$? (c) **What If?** How much charge passes this point between $t = 0$ and $t = \infty$?

W 8. Figure P27.8 represents a section of a conductor of nonuniform diameter carrying a current of $I = 5.00 \text{ A}$. The radius of cross-section A_1 is $r_1 = 0.400 \text{ cm}$. (a) What is the magnitude of the current density across A_1 ? The radius r_2 at A_2 is larger than the radius r_1 at A_1 .

(b) Is the current at A_2 larger, smaller, or the same? (c) Is the current density at A_2 larger, smaller, or the same? Assume $A_2 = 4A_1$. Specify the (d) radius, (e) current, and (f) current density at A_2 .

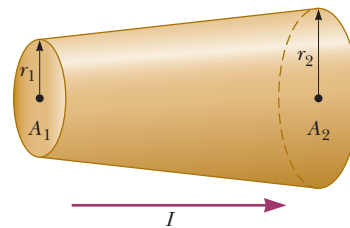


Figure P27.8

W 9. The quantity of charge q (in coulombs) that has passed through a surface of area 2.00 cm^2 varies with time according to the equation $q = 4t^3 + 5t + 6$, where t is in seconds. (a) What is the instantaneous current through the surface at $t = 1.00 \text{ s}$? (b) What is the value of the current density?

10. A Van de Graaff generator produces a beam of 2.00-MeV deuterons, which are heavy hydrogen nuclei containing a proton and a neutron. (a) If the beam current is $10.0 \mu\text{A}$, what is the average separation of the deuterons? (b) Is the electrical force of repulsion among them a significant factor in beam stability? Explain.

M 11. The electron beam emerging from a certain high-energy electron accelerator has a circular cross section of radius 1.00 mm. (a) The beam current is $8.00 \mu\text{A}$. Find the current density in the beam assuming it is uniform throughout. (b) The speed of the electrons is so close to the speed of light that their speed can be taken as 300 Mm/s with negligible error. Find the electron density in the beam. (c) Over what time interval does Avogadro's number of electrons emerge from the accelerator?

W 12. An electric current in a conductor varies with time according to the expression $I(t) = 100 \sin(120\pi t)$, where I is in amperes and t is in seconds. What is the total charge passing a given point in the conductor from $t = 0$ to $t = \frac{1}{240} \text{ s}$?

W 13. A teapot with a surface area of 700 cm^2 is to be plated with silver. It is attached to the negative electrode of an electrolytic cell containing silver nitrate (Ag^+NO_3^-). The cell is powered by a 12.0-V battery and has a

resistance of $1.80\ \Omega$. If the density of silver is $10.5 \times 10^3\ \text{kg/m}^3$, over what time interval does a 0.133-mm layer of silver build up on the teapot?

Section 27.2 Resistance

14. A lightbulb has a resistance of $240\ \Omega$ when operating with a potential difference of $120\ \text{V}$ across it. What is the current in the lightbulb?
15. A wire $50.0\ \text{m}$ long and $2.00\ \text{mm}$ in diameter is connected to a source with a potential difference of $9.11\ \text{V}$, and the current is found to be $36.0\ \text{A}$. Assume a temperature of 20.0°C and, using Table 27.2, identify the metal out of which the wire is made.
16. A 0.900-V potential difference is maintained across a 1.50-m length of tungsten wire that has a cross-sectional area of $0.600\ \text{mm}^2$. What is the current in the wire?
17. An electric heater carries a current of $13.5\ \text{A}$ when operating at a voltage of $120\ \text{V}$. What is the resistance of the heater?
18. Aluminum and copper wires of equal length are found to have the same resistance. What is the ratio of their radii?
19. Suppose you wish to fabricate a uniform wire from $1.00\ \text{g}$ of copper. If the wire is to have a resistance of $R = 0.500\ \Omega$ and all the copper is to be used, what must be (a) the length and (b) the diameter of this wire?
20. Suppose you wish to fabricate a uniform wire from a mass m of a metal with density ρ_m and resistivity ρ . If the wire is to have a resistance of R and all the metal is to be used, what must be (a) the length and (b) the diameter of this wire?
21. A portion of Nichrome wire of radius $2.50\ \text{mm}$ is to be used in winding a heating coil. If the coil must draw a current of $9.25\ \text{A}$ when a voltage of $120\ \text{V}$ is applied across its ends, find (a) the required resistance of the coil and (b) the length of wire you must use to wind the coil.

Section 27.3 A Model for Electrical Conduction

22. If the current carried by a conductor is doubled, what happens to (a) the charge carrier density, (b) the current density, (c) the electron drift velocity, and (d) the average time interval between collisions?
23. A current density of $6.00 \times 10^{-13}\ \text{A/m}^2$ exists in the atmosphere at a location where the electric field is $100\ \text{V/m}$. Calculate the electrical conductivity of the Earth's atmosphere in this region.
24. An iron wire has a cross-sectional area equal to $5.00 \times 10^{-6}\ \text{m}^2$. Carry out the following steps to determine the drift speed of the conduction electrons in the wire if it carries a current of $30.0\ \text{A}$. (a) How many kilograms are there in 1.00 mole of iron? (b) Starting with the density of iron and the result of part (a), compute the molar density of iron (the number of moles of iron per cubic meter). (c) Calculate the number density of

iron atoms using Avogadro's number. (d) Obtain the number density of conduction electrons given that there are two conduction electrons per iron atom. (e) Calculate the drift speed of conduction electrons in this wire.

25. If the magnitude of the drift velocity of free electrons in a copper wire is $7.84 \times 10^{-4}\ \text{m/s}$, what is the electric field in the conductor?

Section 27.4 Resistance and Temperature

26. A certain lightbulb has a tungsten filament with a resistance of $19.0\ \Omega$ when at 20.0°C and $140\ \Omega$ when hot. Assume the resistivity of tungsten varies linearly with temperature even over the large temperature range involved here. Find the temperature of the hot filament.
27. What is the fractional change in the resistance of an iron filament when its temperature changes from 25.0°C to 50.0°C ?
28. While taking photographs in Death Valley on a day when the temperature is 58.0°C , Bill Hiker finds that a certain voltage applied to a copper wire produces a current of $1.00\ \text{A}$. Bill then travels to Antarctica and applies the same voltage to the same wire. What current does he register there if the temperature is -88.0°C ? Assume that no change occurs in the wire's shape and size.
29. If a certain silver wire has a resistance of $6.00\ \Omega$ at 20.0°C , what resistance will it have at 34.0°C ?
30. Plethysmographs are devices used for measuring changes in the volume of internal organs or limbs. In one form of this device, a rubber capillary tube with an inside diameter of $1.00\ \text{mm}$ is filled with mercury at 20.0°C . The resistance of the mercury is measured with the aid of electrodes sealed into the ends of the tube. If $100\ \text{cm}$ of the tube is wound in a helix around a patient's upper arm, the blood flow during a heart-beat causes the arm to expand, stretching the length of the tube by $0.0400\ \text{cm}$. From this observation and assuming cylindrical symmetry, you can find the change in volume of the arm, which gives an indication of blood flow. Taking the resistivity of mercury to be $9.58 \times 10^{-7}\ \Omega \cdot \text{m}$, calculate (a) the resistance of the mercury and (b) the fractional change in resistance during the heartbeat. *Hint:* The fraction by which the cross-sectional area of the mercury column decreases is the fraction by which the length increases because the volume of mercury is constant.
31. (a) A 34.5-m length of copper wire at 20.0°C has a radius of $0.25\ \text{mm}$. If a potential difference of $9.00\ \text{V}$ is applied across the length of the wire, determine the current in the wire. (b) If the wire is heated to 30.0°C while the 9.00-V potential difference is maintained, what is the resulting current in the wire?
32. An engineer needs a resistor with a zero overall temperature coefficient of resistance at 20.0°C . She designs a pair of circular cylinders, one of carbon and one of Nichrome as shown in Figure P27.32 (page 828). The

device must have an overall resistance of $R_1 + R_2 = 10.0\ \Omega$ independent of temperature and a uniform radius of $r = 1.50\ \text{mm}$. Ignore thermal expansion of the cylinders and assume both are always at the same temperature.

(a) Can she meet the design goal with this method?
 (b) If so, state what you can determine about the lengths ℓ_1 and ℓ_2 of each segment. If not, explain.



Figure P27.32

- 33.** An aluminum wire with a diameter of $0.100\ \text{mm}$ has a uniform electric field of $0.200\ \text{V/m}$ imposed along its entire length. The temperature of the wire is 50.0°C . Assume one free electron per atom. (a) Use the information in Table 27.2 to determine the resistivity of aluminum at this temperature. (b) What is the current density in the wire? (c) What is the total current in the wire? (d) What is the drift speed of the conduction electrons? (e) What potential difference must exist between the ends of a 2.00-m length of the wire to produce the stated electric field?
- 34. Review.** An aluminum rod has a resistance of $1.23\ \Omega$ at 20.0°C . Calculate the resistance of the rod at 120°C by accounting for the changes in both the resistivity and the dimensions of the rod. The coefficient of linear expansion for aluminum is $2.40 \times 10^{-6}\ (\text{C}^\circ)^{-1}$.
- 35.** At what temperature will aluminum have a resistivity that is three times the resistivity copper has at room temperature?

Section 27.6 Electrical Power

- 36.** Assume that global lightning on the Earth constitutes a constant current of $1.00\ \text{kA}$ between the ground and an atmospheric layer at potential $300\ \text{kV}$. (a) Find the power of terrestrial lightning. (b) For comparison, find the power of sunlight falling on the Earth. Sunlight has an intensity of $1\ 370\ \text{W/m}^2$ above the atmosphere. Sunlight falls perpendicularly on the circular projected area that the Earth presents to the Sun.
- 37.** In a hydroelectric installation, a turbine delivers $1\ 500\ \text{hp}$ to a generator, which in turn transfers 80.0% of the mechanical energy out by electrical transmission. Under these conditions, what current does the generator deliver at a terminal potential difference of $2\ 000\ \text{V}$?
- 38.** A Van de Graaff generator (see Fig. 25.23) is operating so that the potential difference between the high-potential electrode \textcircled{B} and the charging needles at \textcircled{A} is $15.0\ \text{kV}$. Calculate the power required to drive the belt against electrical forces at an instant when the effective current delivered to the high-potential electrode is $500\ \mu\text{A}$.
- 39.** A certain waffle iron is rated at $1.00\ \text{kW}$ when connected to a 120-V source. (a) What current does the waffle iron carry? (b) What is its resistance?
- 40.** The potential difference across a resting neuron in the human body is about $75.0\ \text{mV}$ and carries a current of about $0.200\ \text{mA}$. How much power does the neuron release?
- 41.** Suppose your portable DVD player draws a current of $350\ \text{mA}$ at $6.00\ \text{V}$. How much power does the player require?
- 42. Review.** A well-insulated electric water heater warms **AMT** $109\ \text{kg}$ of water from 20.0°C to 49.0°C in $25.0\ \text{min}$. **M** Find the resistance of its heating element, which is connected across a 240-V potential difference.
- 43.** A 100-W lightbulb connected to a 120-V source experiences a voltage surge that produces $140\ \text{V}$ for a moment. By what percentage does its power output increase? Assume its resistance does not change.
- 44.** The cost of energy delivered to residences by electrical transmission varies from $\$0.070/\text{kWh}$ to $\$0.258/\text{kWh}$ throughout the United States; $\$0.110/\text{kWh}$ is the average value. At this average price, calculate the cost of (a) leaving a 40.0-W porch light on for two weeks while you are on vacation, (b) making a piece of dark toast in $3.00\ \text{min}$ with a 970-W toaster, and (c) drying a load of clothes in $40.0\ \text{min}$ in a $5.20 \times 10^3\text{-W}$ dryer.
- 45.** Batteries are rated in terms of ampere-hours ($\text{A} \cdot \text{h}$). **W** For example, a battery that can produce a current of $2.00\ \text{A}$ for $3.00\ \text{h}$ is rated at $6.00\ \text{A} \cdot \text{h}$. (a) What is the total energy, in kilowatt-hours, stored in a 12.0-V battery rated at $55.0\ \text{A} \cdot \text{h}$? (b) At $\$0.110$ per kilowatt-hour, what is the value of the electricity produced by this battery?
- 46.** Residential building codes typically require the use **W** of 12-gauge copper wire (diameter $0.205\ \text{cm}$) for wiring receptacles. Such circuits carry currents as large as $20.0\ \text{A}$. If a wire of smaller diameter (with a higher gauge number) carried that much current, the wire could rise to a high temperature and cause a fire. (a) Calculate the rate at which internal energy is produced in $1.00\ \text{m}$ of 12-gauge copper wire carrying $20.0\ \text{A}$. (b) **What If?** Repeat the calculation for a 12-gauge aluminum wire. (c) Explain whether a 12-gauge aluminum wire would be as safe as a copper wire.
- 47.** Assuming the cost of energy from the electric company **M** is $\$0.110/\text{kWh}$, compute the cost per day of operating a lamp that draws a current of $1.70\ \text{A}$ from a 110-V line.
- 48.** An 11.0-W energy-efficient fluorescent lightbulb is designed to produce the same illumination as a conventional 40.0-W incandescent lightbulb. Assuming a cost of $\$0.110/\text{kWh}$ for energy from the electric company, how much money does the user of the energy-efficient bulb save during $100\ \text{h}$ of use?
- 49.** A coil of Nichrome wire is $25.0\ \text{m}$ long. The wire has a diameter of $0.400\ \text{mm}$ and is at 20.0°C . If it carries a current of $0.500\ \text{A}$, what are (a) the magnitude of the electric field in the wire and (b) the power delivered to it? (c) **What If?** If the temperature is increased to 340°C and the potential difference across the wire remains constant, what is the power delivered?
- 50. Review.** A rechargeable battery of mass $15.0\ \text{g}$ delivers an average current of $18.0\ \text{mA}$ to a portable DVD player at $1.60\ \text{V}$ for $2.40\ \text{h}$ before the battery must be

- recharged. The recharger maintains a potential difference of 2.30 V across the battery and delivers a charging current of 13.5 mA for 4.20 h. (a) What is the efficiency of the battery as an energy storage device? (b) How much internal energy is produced in the battery during one charge–discharge cycle? (c) If the battery is surrounded by ideal thermal insulation and has an effective specific heat of $975 \text{ J/kg} \cdot ^\circ\text{C}$, by how much will its temperature increase during the cycle?
51. A 500-W heating coil designed to operate from 110 V is made of Nichrome wire 0.500 mm in diameter. (a) Assuming the resistivity of the Nichrome remains constant at its 20.0°C value, find the length of wire used. (b) **What If?** Now consider the variation of resistivity with temperature. What power is delivered to the coil of part (a) when it is warmed to 1200°C ?
52. *Why is the following situation impossible?* A politician is decrying wasteful uses of energy and decides to focus on energy used to operate plug-in electric clocks in the United States. He estimates there are 270 million of these clocks, approximately one clock for each person in the population. The clocks transform energy taken in by electrical transmission at the average rate 2.50 W. The politician gives a speech in which he complains that, at today's electrical rates, the nation is losing \$100 million every year to operate these clocks.
53. **M** A certain toaster has a heating element made of Nichrome wire. When the toaster is first connected to a 120-V source (and the wire is at a temperature of 20.0°C), the initial current is 1.80 A. The current decreases as the heating element warms up. When the toaster reaches its final operating temperature, the current is 1.53 A. (a) Find the power delivered to the toaster when it is at its operating temperature. (b) What is the final temperature of the heating element?
54. Make an order-of-magnitude estimate of the cost of one person's routine use of a handheld hair dryer for 1 year. If you do not use a hair dryer yourself, observe or interview someone who does. State the quantities you estimate and their values.
55. **Review.** The heating element of an electric coffee maker operates at 120 V and carries a current of 2.00 A. Assuming the water absorbs all the energy delivered to the resistor, calculate the time interval during which the temperature of 0.500 kg of water rises from room temperature (23.0°C) to the boiling point.
56. A 120-V motor has mechanical power output of 2.50 hp. It is 90.0% efficient in converting power that it takes in by electrical transmission into mechanical power. (a) Find the current in the motor. (b) Find the energy delivered to the motor by electrical transmission in 3.00 h of operation. (c) If the electric company charges $\$0.110/\text{kWh}$, what does it cost to run the motor for 3.00 h?
- 48 W of power when connected across a 20-V battery. What length of wire is required?
58. Determine the temperature at which the resistance of an aluminum wire will be twice its value at 20.0°C . Assume its coefficient of resistivity remains constant.
59. A car owner forgets to turn off the headlights of his car while it is parked in his garage. If the 12.0-V battery in his car is rated at $90.0 \text{ A} \cdot \text{h}$ and each headlight requires 36.0 W of power, how long will it take the battery to completely discharge?
60. Lightbulb A is marked "25 W 120 V," and lightbulb B is marked "100 W 120 V." These labels mean that each lightbulb has its respective power delivered to it when it is connected to a constant 120-V source. (a) Find the resistance of each lightbulb. (b) During what time interval does 1.00 C pass into lightbulb A? (c) Is this charge different upon its exit versus its entry into the lightbulb? Explain. (d) In what time interval does 1.00 J pass into lightbulb A? (e) By what mechanisms does this energy enter and exit the lightbulb? Explain. (f) Find the cost of running lightbulb A continuously for 30.0 days, assuming the electric company sells its product at $\$0.110$ per kWh.
61. **W** One wire in a high-voltage transmission line carries 1000 A starting at 700 kV for a distance of 100 mi. If the resistance in the wire is $0.500 \Omega/\text{mi}$, what is the power loss due to the resistance of the wire?
62. An experiment is conducted to measure the electrical resistivity of Nichrome in the form of wires with different lengths and cross-sectional areas. For one set of measurements, a student uses 30-gauge wire, which has a cross-sectional area of $7.30 \times 10^{-8} \text{ m}^2$. The student measures the potential difference across the wire and the current in the wire with a voltmeter and an ammeter, respectively. (a) For each set of measurements given in the table taken on wires of three different lengths, calculate the resistance of the wires and the corresponding values of the resistivity. (b) What is the average value of the resistivity? (c) Explain how this value compares with the value given in Table 27.2.

L (m)	ΔV (V)	I (A)	R (Ω)	ρ ($\Omega \cdot \text{m}$)
0.540	5.22	0.72		
1.028	5.82	0.414		
1.543	5.94	0.281		

63. A charge Q is placed on a capacitor of capacitance C . The capacitor is connected into the circuit shown in Figure P27.63, with an open switch, a resistor, and an initially uncharged capacitor of capacitance $3C$. The

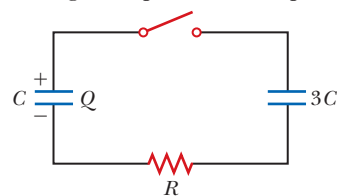


Figure P27.63

Additional Problems

57. **M** A particular wire has a resistivity of $3.0 \times 10^{-8} \Omega \cdot \text{m}$ and a cross-sectional area of $4.0 \times 10^{-6} \text{ m}^2$. A length of this wire is to be used as a resistor that will receive

- switch is then closed, and the circuit comes to equilibrium. In terms of Q and C , find (a) the final potential difference between the plates of each capacitor, (b) the charge on each capacitor, and (c) the final energy stored in each capacitor. (d) Find the internal energy appearing in the resistor.
- 64. Review.** An office worker uses an immersion heater to warm 250 g of water in a light, covered, insulated cup from 20.0°C to 100°C in 4.00 min. The heater is a Nichrome resistance wire connected to a 120-V power supply. Assume the wire is at 100°C throughout the 4.00-min time interval. (a) Specify a relationship between a diameter and a length that the wire can have. (b) Can it be made from less than 0.500 cm³ of Nichrome?
- 65.** An x-ray tube used for cancer therapy operates at 4.00 MV with electrons constituting a beam current of 25.0 mA striking a metal target. Nearly all the power in the beam is transferred to a stream of water flowing through holes drilled in the target. What rate of flow, in kilograms per second, is needed if the rise in temperature of the water is not to exceed 50.0°C?
- 66.** **AMT** An all-electric car (not a hybrid) is designed to run **M** from a bank of 12.0-V batteries with total energy storage of 2.00×10^7 J. If the electric motor draws 8.00 kW as the car moves at a steady speed of 20.0 m/s, (a) what is the current delivered to the motor? (b) How far can the car travel before it is “out of juice”?
- 67.** A straight, cylindrical wire lying along the x axis has a length of 0.500 m and a diameter of 0.200 mm. It is made of a material described by Ohm’s law with a resistivity of $\rho = 4.00 \times 10^{-8} \Omega \cdot \text{m}$. Assume a potential of 4.00 V is maintained at the left end of the wire at $x = 0$. Also assume $V = 0$ at $x = 0.500$ m. Find (a) the magnitude and direction of the electric field in the wire, (b) the resistance of the wire, (c) the magnitude and direction of the electric current in the wire, and (d) the current density in the wire. (e) Show that $E = \rho j$.
- 68.** A straight, cylindrical wire lying along the x axis has a length L and a diameter d . It is made of a material described by Ohm’s law with a resistivity ρ . Assume potential V is maintained at the left end of the wire at $x = 0$. Also assume the potential is zero at $x = L$. In terms of L , d , V , ρ , and physical constants, derive expressions for (a) the magnitude and direction of the electric field in the wire, (b) the resistance of the wire, (c) the magnitude and direction of the electric current in the wire, and (d) the current density in the wire. (e) Show that $E = \rho j$.
- 69.** **W** An electric utility company supplies a customer’s house from the main power lines (120 V) with two copper wires, each of which is 50.0 m long and has a resistance of 0.108 Ω per 300 m. (a) Find the potential difference at the customer’s house for a load current of 110 A. For this load current, find (b) the power delivered to the customer and (c) the rate at which internal energy is produced in the copper wires.
- 70.** The strain in a wire can be monitored and computed by measuring the resistance of the wire. Let L_i represent the original length of the wire, A_i its original cross-sectional area, $R_i = \rho L_i/A_i$ the original resistance between its ends, and $\delta = \Delta L/L_i = (L - L_i)/L_i$ the strain resulting from the application of tension. Assume the resistivity and the volume of the wire do not change as the wire stretches. (a) Show that the resistance between the ends of the wire under strain is given by $R = R_i(1 + 2\delta + \delta^2)$. (b) If the assumptions are precisely true, is this result exact or approximate? Explain your answer.
- 71.** An oceanographer is studying how the ion concentration in seawater depends on depth. She makes a measurement by lowering into the water a pair of concentric metallic cylinders (Fig. P27.71) at the end of a cable and taking data to determine the resistance between these electrodes as a function of depth. The water between the two cylinders forms a cylindrical shell of inner radius r_a , outer radius r_b , and length L much larger than r_b . The scientist applies a potential difference ΔV between the inner and outer surfaces, producing an outward radial current I . Let ρ represent the resistivity of the water. (a) Find the resistance of the water between the cylinders in terms of L , ρ , r_a , and r_b . (b) Express the resistivity of the water in terms of the measured quantities L , r_a , r_b , ΔV , and I .

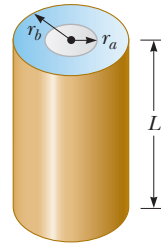


Figure P27.71

- 72.** Why is the following situation impossible? An inquisitive physics student takes a 100-W incandescent lightbulb out of its socket and measures its resistance with an ohmmeter. He measures a value of 10.5 Ω . He is able to connect an ammeter to the lightbulb socket to correctly measure the current drawn by the bulb while operating. Inserting the bulb back into the socket and operating the bulb from a 120-V source, he measures the current to be 11.4 A.
- 73.** The temperature coefficients of resistivity α in Table 27.2 are based on a reference temperature T_0 of 20.0°C. Suppose the coefficients were given the symbol α' and were based on a T_0 of 0°C. What would the coefficient α' for silver be? *Note:* The coefficient α satisfies $\rho = \rho_0[1 + \alpha(T - T_0)]$, where ρ_0 is the resistivity of the material at $T_0 = 20.0^\circ\text{C}$. The coefficient α' must satisfy the expression $\rho = \rho'_0[1 + \alpha'T]$, where ρ'_0 is the resistivity of the material at 0°C.
- 74.** A close analogy exists between the flow of energy by heat because of a temperature difference (see Section 20.7) and the flow of electric charge because of a

potential difference. In a metal, energy dQ and electrical charge dq are both transported by free electrons. Consequently, a good electrical conductor is usually a good thermal conductor as well. Consider a thin conducting slab of thickness dx , area A , and electrical conductivity σ , with a potential difference dV between opposite faces. (a) Show that the current $I = dq/dt$ is given by the equation on the left:

Charge conduction Thermal conduction

$$\frac{dq}{dt} = \sigma A \left| \frac{dV}{dx} \right| \qquad \frac{dQ}{dt} = kA \left| \frac{dT}{dx} \right|$$

In the analogous thermal conduction equation on the right (Eq. 20.15), the rate dQ/dt of energy flow by heat (in SI units of joules per second) is due to a temperature gradient dT/dx in a material of thermal conductivity k . (b) State analogous rules relating the direction of the electric current to the change in potential and relating the direction of energy flow to the change in temperature.

- 75. Review.** When a straight wire is warmed, its resistance is given by $R = R_0[1 + \alpha(T - T_0)]$ according to Equation 27.20, where α is the temperature coefficient of resistivity. This expression needs to be modified if we include the change in dimensions of the wire due to thermal expansion. For a copper wire of radius 0.100 0 mm and length 2.000 m, find its resistance at 100.0°C, including the effects of both thermal expansion and temperature variation of resistivity. Assume the coefficients are known to four significant figures.
- 76. Review.** When a straight wire is warmed, its resistance is given by $R = R_0[1 + \alpha(T - T_0)]$ according to Equation 27.20, where α is the temperature coefficient of resistivity. This expression needs to be modified if we include the change in dimensions of the wire due to thermal expansion. Find a more precise expression for the resistance, one that includes the effects of changes in the dimensions of the wire when it is warmed. Your final expression should be in terms of R_0 , T , T_0 , the temperature coefficient of resistivity α , and the coefficient of linear expansion α' .
- 77. Review.** A parallel-plate capacitor consists of square plates of edge length ℓ that are separated by a distance d , where $d \ll \ell$. A potential difference ΔV is maintained between the plates. A material of dielectric constant κ fills half the space between the plates. The dielectric slab is withdrawn from the capacitor as shown in Figure P27.77. (a) Find the capacitance when

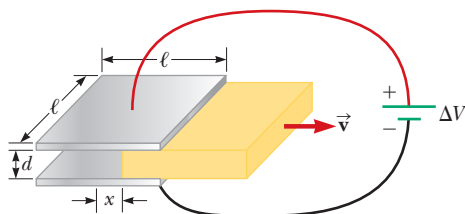


Figure P27.77

the left edge of the dielectric is at a distance x from the center of the capacitor. (b) If the dielectric is removed at a constant speed v , what is the current in the circuit as the dielectric is being withdrawn?

- 78.** The dielectric material between the plates of a parallel-plate capacitor always has some nonzero conductivity σ . Let A represent the area of each plate and d the distance between them. Let κ represent the dielectric constant of the material. (a) Show that the resistance R and the capacitance C of the capacitor are related by

$$RC = \frac{\kappa \epsilon_0}{\sigma}$$

- (b) Find the resistance between the plates of a 14.0-nF capacitor with a fused quartz dielectric.
- 79.** Gold is the most ductile of all metals. For example, one gram of gold can be drawn into a wire 2.40 km long. The density of gold is $19.3 \times 10^3 \text{ kg/m}^3$, and its resistivity is $2.44 \times 10^{-8} \Omega \cdot \text{m}$. What is the resistance of such a wire at 20.0°C?

- 80.** The current–voltage characteristic curve for a semiconductor diode as a function of temperature T is given by

$$I = I_0(e^{e\Delta V/k_B T} - 1)$$

Here the first symbol e represents Euler's number, the base of natural logarithms. The second e is the magnitude of the electron charge, the k_B stands for Boltzmann's constant, and T is the absolute temperature. (a) Set up a spreadsheet to calculate I and $R = \Delta V/I$ for $\Delta V = 0.400 \text{ V}$ to 0.600 V in increments of 0.005 V . Assume $I_0 = 1.00 \text{ nA}$. (b) Plot R versus ΔV for $T = 280 \text{ K}$, 300 K , and 320 K .

- 81.** The potential difference across the filament of a light-bulb is maintained at a constant value while equilibrium temperature is being reached. The steady-state current in the bulb is only one-tenth of the current drawn by the bulb when it is first turned on. If the temperature coefficient of resistivity for the bulb at 20.0°C is $0.00450 (\text{°C})^{-1}$ and the resistance increases linearly with increasing temperature, what is the final operating temperature of the filament?

Challenge Problems

- 82.** A more general definition of the temperature coefficient of resistivity is

$$\alpha = \frac{1}{\rho} \frac{d\rho}{dT}$$

where ρ is the resistivity at temperature T . (a) Assuming α is constant, show that

$$\rho = \rho_0 e^{\alpha(T - T_0)}$$

where ρ_0 is the resistivity at temperature T_0 . (b) Using the series expansion $e^x \approx 1 + x$ for $x \ll 1$, show that the resistivity is given approximately by the expression

$$\rho = \rho_0 [1 + \alpha(T - T_0)] \quad \text{for } \alpha(T - T_0) \ll 1$$

- 83.** A spherical shell with inner radius r_a and outer radius r_b is formed from a material of resistivity ρ . It carries

current radially, with uniform density in all directions. Show that its resistance is

$$R = \frac{\rho}{4\pi} \left(\frac{1}{r_a} - \frac{1}{r_b} \right)$$

- 84.** Material with uniform resistivity ρ is formed into a wedge as shown in Figure P27.84. Show that the resistance between face A and face B of this wedge is

$$R = \rho \frac{L}{w(y_2 - y_1)} \ln \frac{y_2}{y_1}$$

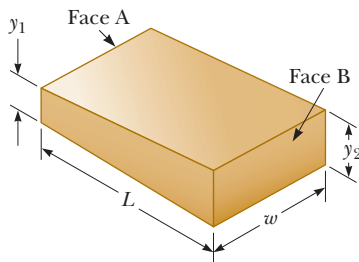


Figure P27.84

- 85.** A material of resistivity ρ is formed into the shape of a truncated cone of height h as shown in Figure P27.85. The bottom end has radius b , and the top end has radius a . Assume the current is distributed uniformly over any circular cross section of the cone so that the current density does not depend on radial position. (The current density does vary with position along the axis of the cone.) Show that the resistance between the two ends is

$$R = \frac{\rho}{\pi} \left(\frac{h}{ab} \right)$$

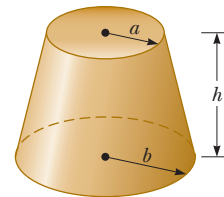



Figure P27.85

Direct-Current Circuits

CHAPTER

28



- 28.1 Electromotive Force
- 28.2 Resistors in Series and Parallel
- 28.3 Kirchhoff's Rules
- 28.4 RC Circuits
- 28.5 Household Wiring and Electrical Safety

In this chapter, we analyze simple electric circuits that contain batteries, resistors, and capacitors in various combinations. Some circuits contain resistors that can be combined using simple rules. The analysis of more complicated circuits is simplified using *Kirchhoff's rules*, which follow from the laws of conservation of energy and conservation of electric charge for isolated systems. Most of the circuits analyzed are assumed to be in *steady state*, which means that currents in the circuit are constant in magnitude and direction. A current that is constant in direction is called a *direct current* (DC). We will study *alternating current* (AC), in which the current changes direction periodically, in Chapter 33. Finally, we discuss electrical circuits in the home.

A technician repairs a connection on a circuit board from a computer. In our lives today, we use various items containing electric circuits, including many with circuit boards much smaller than the board shown in the photograph. These include handheld game players, cell phones, and digital cameras. In this chapter, we study simple types of circuits and learn how to analyze them.

(Trombax/Shutterstock.com)

28.1 Electromotive Force

In Section 27.6, we discussed a circuit in which a battery produces a current. We will generally use a battery as a source of energy for circuits in our discussion. Because the potential difference at the battery terminals is constant in a particular circuit, the current in the circuit is constant in magnitude and direction and is called **direct current**. A battery is called either a *source of electromotive force* or, more commonly, a *source of emf*. (The phrase *electromotive force* is an unfortunate historical term, describing not a force, but rather a potential difference in volts.) The **emf \mathcal{E}** of a battery is **the maximum possible voltage the battery can provide between its terminals**. You can think of a source of emf as a “charge pump.” When an electric potential difference exists between two points, the source moves charges “uphill” from the lower potential to the higher.

We shall generally assume the connecting wires in a circuit have no resistance. The positive terminal of a battery is at a higher potential than the negative terminal.

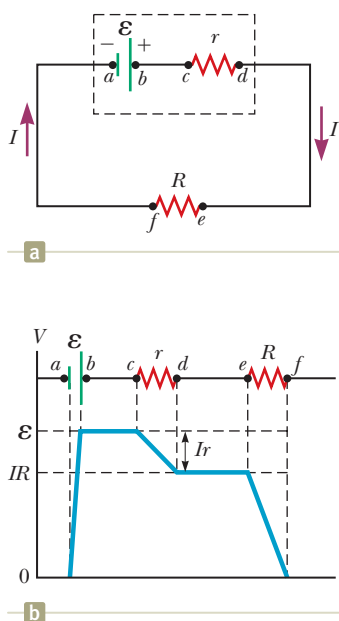


Figure 28.1 (a) Circuit diagram of a source of emf \mathcal{E} (in this case, a battery), of internal resistance r , connected to an external resistor of resistance R . (b) Graphical representation showing how the electric potential changes as the circuit in (a) is traversed clockwise.

Because a real battery is made of matter, there is resistance to the flow of charge within the battery. This resistance is called **internal resistance** r . For an idealized battery with zero internal resistance, the potential difference across the battery (called its *terminal voltage*) equals its emf. For a real battery, however, the terminal voltage is *not* equal to the emf for a battery in a circuit in which there is a current. To understand why, consider the circuit diagram in Figure 28.1a. We model the battery as shown in the diagram; it is represented by the dashed rectangle containing an ideal, resistance-free emf \mathcal{E} in series with an internal resistance r . A resistor of resistance R is connected across the terminals of the battery. Now imagine moving through the battery from a to d and measuring the electric potential at various locations. Passing from the negative terminal to the positive terminal, the potential increases by an amount \mathcal{E} . As we move through the resistance r , however, the potential *decreases* by an amount Ir , where I is the current in the circuit. Therefore, the terminal voltage of the battery $\Delta V = V_d - V_a$ is

$$\Delta V = \mathcal{E} - Ir \quad (28.1)$$

From this expression, notice that \mathcal{E} is equivalent to the **open-circuit voltage**, that is, the terminal voltage when the current is zero. The emf is the voltage labeled on a battery; for example, the emf of a D cell is 1.5 V. The actual potential difference between a battery's terminals depends on the current in the battery as described by Equation 28.1. Figure 28.1b is a graphical representation of the changes in electric potential as the circuit is traversed in the clockwise direction.

Figure 28.1a shows that the terminal voltage ΔV must equal the potential difference across the external resistance R , often called the **load resistance**. The load resistor might be a simple resistive circuit element as in Figure 28.1a, or it could be the resistance of some electrical device (such as a toaster, electric heater, or lightbulb) connected to the battery (or, in the case of household devices, to the wall outlet). The resistor represents a *load* on the battery because the battery must supply energy to operate the device containing the resistance. The potential difference across the load resistance is $\Delta V = IR$. Combining this expression with Equation 28.1, we see that

$$\mathcal{E} = IR + Ir \quad (28.2)$$

Figure 28.1a shows a graphical representation of this equation. Solving for the current gives

$$I = \frac{\mathcal{E}}{R + r} \quad (28.3)$$

Equation 28.3 shows that the current in this simple circuit depends on both the load resistance R external to the battery and the internal resistance r . If R is much greater than r , as it is in many real-world circuits, we can neglect r .

Multiplying Equation 28.2 by the current I in the circuit gives

$$I\mathcal{E} = I^2R + I^2r \quad (28.4)$$

Equation 28.4 indicates that because power $P = I\Delta V$ (see Eq. 27.21), the total power output $I\mathcal{E}$ associated with the emf of the battery is delivered to the external load resistance in the amount I^2R and to the internal resistance in the amount I^2r .

Quick Quiz 28.1 To maximize the percentage of the power from the emf of a battery that is delivered to a device external to the battery, what should the internal resistance of the battery be? (a) It should be as low as possible. (b) It should be as high as possible. (c) The percentage does not depend on the internal resistance.

Pitfall Prevention 28.1

What Is Constant in a Battery?

It is a common misconception that a battery is a source of constant current. Equation 28.3 shows that is not true. The current in the circuit depends on the resistance R connected to the battery. It is also not true that a battery is a source of constant terminal voltage as shown by Equation 28.1. **A battery is a source of constant emf.**

Example 28.1

Terminal Voltage of a Battery

A battery has an emf of 12.0 V and an internal resistance of 0.050 Ω . Its terminals are connected to a load resistance of 3.00 Ω .

▶ 28.1 continued

(A) Find the current in the circuit and the terminal voltage of the battery.

SOLUTION

Conceptualize Study Figure 28.1a, which shows a circuit consistent with the problem statement. The battery delivers energy to the load resistor.

Categorize This example involves simple calculations from this section, so we categorize it as a substitution problem.

Use Equation 28.3 to find the current in the circuit:

$$I = \frac{\mathcal{E}}{R + r} = \frac{12.0 \text{ V}}{3.00 \Omega + 0.0500 \Omega} = 3.93 \text{ A}$$

Use Equation 28.1 to find the terminal voltage:

$$\Delta V = \mathcal{E} - Ir = 12.0 \text{ V} - (3.93 \text{ A})(0.0500 \Omega) = 11.8 \text{ V}$$

To check this result, calculate the voltage across the load resistance R :

$$\Delta V = IR = (3.93 \text{ A})(3.00 \Omega) = 11.8 \text{ V}$$

(B) Calculate the power delivered to the load resistor, the power delivered to the internal resistance of the battery, and the power delivered by the battery.

SOLUTION

Use Equation 27.22 to find the power delivered to the load resistor:

$$P_R = I^2R = (3.93 \text{ A})^2(3.00 \Omega) = 46.3 \text{ W}$$

Find the power delivered to the internal resistance:

$$P_r = I^2r = (3.93 \text{ A})^2(0.0500 \Omega) = 0.772 \text{ W}$$

Find the power delivered by the battery by adding these quantities:

$$P = P_R + P_r = 46.3 \text{ W} + 0.772 \text{ W} = 47.1 \text{ W}$$

WHAT IF? As a battery ages, its internal resistance increases. Suppose the internal resistance of this battery rises to 2.00Ω toward the end of its useful life. How does that alter the battery's ability to deliver energy?

Answer Let's connect the same $3.00\text{-}\Omega$ load resistor to the battery.

Find the new current in the battery:

$$I = \frac{\mathcal{E}}{R + r} = \frac{12.0 \text{ V}}{3.00 \Omega + 2.00 \Omega} = 2.40 \text{ A}$$

Find the new terminal voltage:

$$\Delta V = \mathcal{E} - Ir = 12.0 \text{ V} - (2.40 \text{ A})(2.00 \Omega) = 7.2 \text{ V}$$

Find the new powers delivered to the load resistor and internal resistance:

$$P_R = I^2R = (2.40 \text{ A})^2(3.00 \Omega) = 17.3 \text{ W}$$

$$P_r = I^2r = (2.40 \text{ A})^2(2.00 \Omega) = 11.5 \text{ W}$$

In this situation, the terminal voltage is only 60% of the emf. Notice that 40% of the power from the battery is delivered to the internal resistance when r is 2.00Ω . When r is 0.0500Ω as in part (B), this percentage is only 1.6%. Consequently, even though the emf remains fixed, the increasing internal resistance of the battery significantly reduces the battery's ability to deliver energy to an external load.

Example 28.2 Matching the Load

Find the load resistance R for which the maximum power is delivered to the load resistance in Figure 28.1a.

SOLUTION

Conceptualize Think about varying the load resistance in Figure 28.1a and the effect on the power delivered to the load resistance. When R is large, there is very little current, so the power I^2R delivered to the load resistor is small.

continued

28.2 continued

When R is small, let's say $R \ll r$, the current is large and the power delivered to the internal resistance is $I^2 r \gg I^2 R$. Therefore, the power delivered to the load resistor is small compared to that delivered to the internal resistance. For some intermediate value of the resistance R , the power must maximize.

Categorize We categorize this example as an analysis problem because we must undertake a procedure to maximize the power. The circuit is the same as that in Example 28.1. The load resistance R in this case, however, is a variable.

Analyze Find the power delivered to the load resistance using Equation 27.22, with I given by Equation 28.3:

Differentiate the power with respect to the load resistance R and set the derivative equal to zero to maximize the power:

Solve for R :

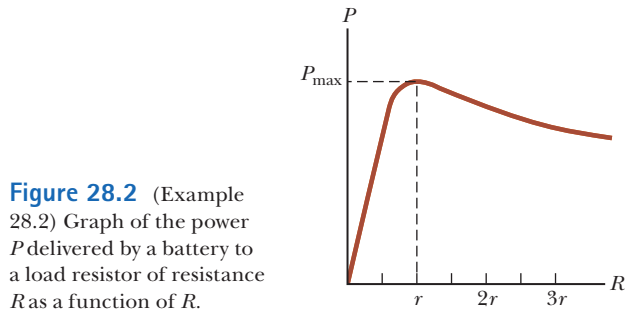


Figure 28.2 (Example 28.2) Graph of the power P delivered by a battery to a load resistor of resistance R as a function of R .

$$(1) \quad P = I^2 R = \frac{\mathcal{E}^2 R}{(R + r)^2}$$

$$\frac{dP}{dR} = \frac{d}{dR} \left[\frac{\mathcal{E}^2 R}{(R + r)^2} \right] = \frac{d}{dR} [\mathcal{E}^2 R (R + r)^{-2}] = 0$$

$$[\mathcal{E}^2 (R + r)^{-2}] + [\mathcal{E}^2 R (-2)(R + r)^{-3}] = 0$$

$$\frac{\mathcal{E}^2 (R + r)}{(R + r)^3} - \frac{2\mathcal{E}^2 R}{(R + r)^3} = \frac{\mathcal{E}^2 (r - R)}{(R + r)^3} = 0$$

$$R = r$$

Finalize To check this result, let's plot P versus R as in Figure 28.2. The graph shows that P reaches a maximum value at $R = r$. Equation (1) shows that this maximum value is $P_{\max} = \mathcal{E}^2/4r$.

28.2 Resistors in Series and Parallel

When two or more resistors are connected together as are the incandescent lightbulbs in Figure 28.3a, they are said to be in a **series combination**. Figure 28.3b is the circuit diagram for the lightbulbs, shown as resistors, and the battery. What if you wanted to replace the series combination with a single resistor that would draw the same current from the battery? What would be its value? In a series connection, if an amount of charge Q exits resistor R_1 , charge Q must also enter the second resistor R_2 . Otherwise, charge would accumulate on the wire between the resistors. Therefore, the same amount of charge passes through both resistors in a given time interval and the currents are the same in both resistors:

$$I = I_1 = I_2$$

where I is the current leaving the battery, I_1 is the current in resistor R_1 , and I_2 is the current in resistor R_2 .

The potential difference applied across the series combination of resistors divides between the resistors. In Figure 28.3b, because the voltage drop¹ from a to b equals $I_1 R_1$ and the voltage drop from b to c equals $I_2 R_2$, the voltage drop from a to c is

$$\Delta V = \Delta V_1 + \Delta V_2 = I_1 R_1 + I_2 R_2$$

The potential difference across the battery is also applied to the **equivalent resistance** R_{eq} in Figure 28.3c:

$$\Delta V = I R_{\text{eq}}$$

¹The term *voltage drop* is synonymous with a decrease in electric potential across a resistor. It is often used by individuals working with electric circuits.

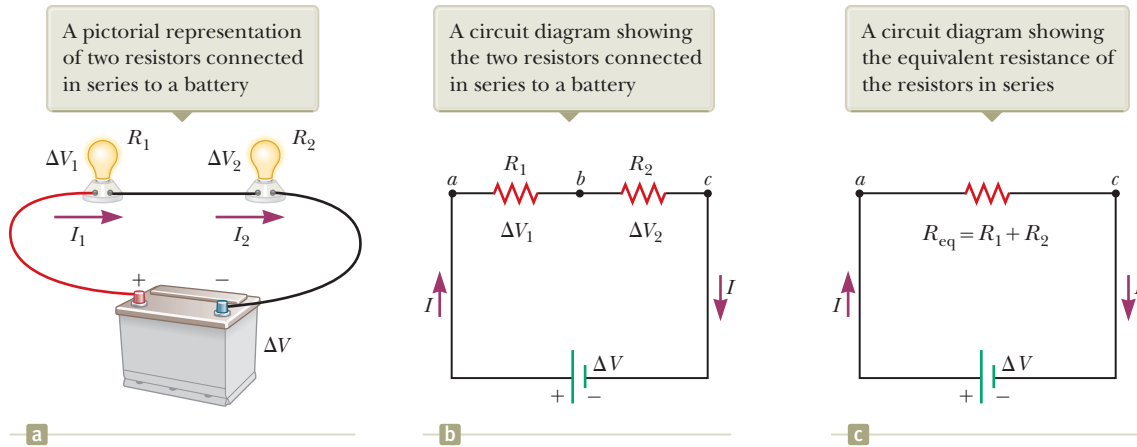


Figure 28.3 Two lightbulbs with resistances R_1 and R_2 connected in series. All three diagrams are equivalent.

where the equivalent resistance has the same effect on the circuit as the series combination because it results in the same current I in the battery. Combining these equations for ΔV gives

$$IR_{\text{eq}} = I_1R_1 + I_2R_2 \rightarrow R_{\text{eq}} = R_1 + R_2 \quad (28.5)$$

where we have canceled the currents I , I_1 , and I_2 because they are all the same. We see that we can replace the two resistors in series with a single equivalent resistance whose value is the *sum* of the individual resistances.

The equivalent resistance of three or more resistors connected in series is

$$R_{\text{eq}} = R_1 + R_2 + R_3 + \cdots \quad (28.6)$$

This relationship indicates that the equivalent resistance of a series combination of resistors is the numerical sum of the individual resistances and is always greater than any individual resistance.

Looking back at Equation 28.3, we see that the denominator of the right-hand side is the simple algebraic sum of the external and internal resistances. That is consistent with the internal and external resistances being in series in Figure 28.1a.

If the filament of one lightbulb in Figure 28.3 were to fail, the circuit would no longer be complete (resulting in an open-circuit condition) and the second lightbulb would also go out. This fact is a general feature of a series circuit: if one device in the series creates an open circuit, all devices are inoperative.

Quick Quiz 28.2 With the switch in the circuit of Figure 28.4a closed, there is no current in R_2 because the current has an alternate zero-resistance path through the switch. There is current in R_1 , and this current is measured with the ammeter (a device for measuring current) at the bottom of the circuit. If the switch is opened (Fig. 28.4b), there is current in R_2 . What happens to the reading on the ammeter when the switch is opened? **(a)** The reading goes up. **(b)** The reading goes down. **(c)** The reading does not change.

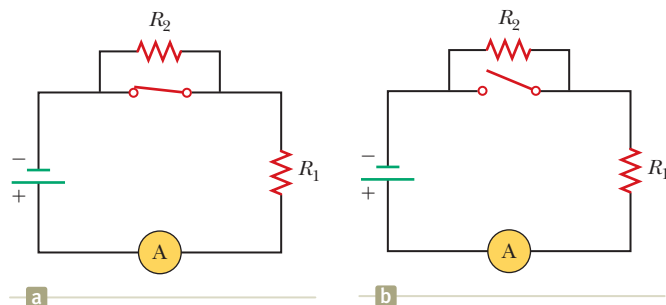


Figure 28.4 (Quick Quiz 28.2) What happens when the switch is opened?

◀ The equivalent resistance of a series combination of resistors

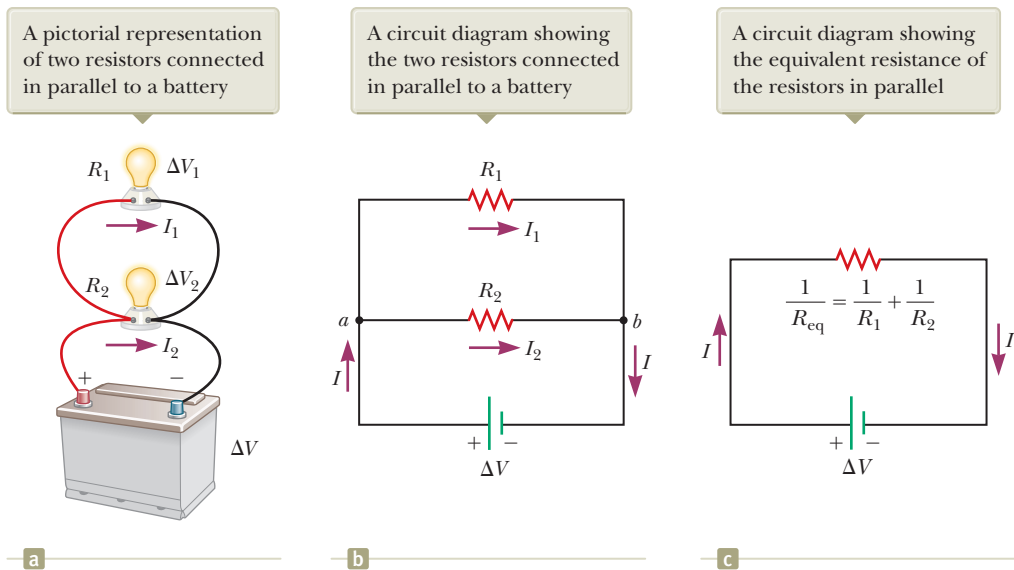
Pitfall Prevention 28.2

Lightbulbs Don't Burn We will describe the end of the life of an incandescent lightbulb by saying *the filament fails* rather than by saying the lightbulb “burns out.” The word *burn* suggests a combustion process, which is not what occurs in a lightbulb. The failure of a lightbulb results from the slow sublimation of tungsten from the very hot filament over the life of the lightbulb. The filament eventually becomes very thin because of this process. The mechanical stress from a sudden temperature increase when the lightbulb is turned on causes the thin filament to break.

Pitfall Prevention 28.3

Local and Global Changes A *local change in one part of a circuit may result in a global change throughout the circuit*. For example, if a single resistor is changed in a circuit containing several resistors and batteries, the currents in all resistors and batteries, the terminal voltages of all batteries, and the voltages across all resistors may change as a result.

Figure 28.5 Two lightbulbs with resistances R_1 and R_2 connected in parallel. All three diagrams are equivalent.



Pitfall Prevention 28.4

Current Does Not Take the Path of Least Resistance You may have heard the phrase “current takes the path of least resistance” (or similar wording) in reference to a parallel combination of current paths such that there are two or more paths for the current to take. Such wording is incorrect. The current takes *all* paths. Those paths with lower resistance have larger currents, but even very high resistance paths carry *some* of the current. In theory, if current has a choice between a zero-resistance path and a finite resistance path, all the current takes the path of zero resistance; a path with zero resistance, however, is an idealization.

Now consider two resistors in a **parallel combination** as shown in Figure 28.5. As with the series combination, what is the value of the single resistor that could replace the combination and draw the same current from the battery? Notice that both resistors are connected directly across the terminals of the battery. Therefore, the potential differences across the resistors are the same:

$$\Delta V = \Delta V_1 = \Delta V_2$$

where ΔV is the terminal voltage of the battery.

When charges reach point a in Figure 28.5b, they split into two parts, with some going toward R_1 and the rest going toward R_2 . A **junction** is any such point in a circuit where a current can split. This split results in less current in each individual resistor than the current leaving the battery. Because electric charge is conserved, the current I that enters point a must equal the total current leaving that point:

$$I = I_1 + I_2 = \frac{\Delta V_1}{R_1} + \frac{\Delta V_2}{R_2}$$

where I_1 is the current in R_1 and I_2 is the current in R_2 .

The current in the **equivalent resistance** R_{eq} in Figure 28.5c is

$$I = \frac{\Delta V}{R_{\text{eq}}}$$

where the equivalent resistance has the same effect on the circuit as the two resistors in parallel; that is, the equivalent resistance draws the same current I from the battery. Combining these equations for I , we see that the equivalent resistance of two resistors in parallel is given by

$$\frac{\Delta V}{R_{\text{eq}}} = \frac{\Delta V_1}{R_1} + \frac{\Delta V_2}{R_2} \rightarrow \frac{1}{R_{\text{eq}}} = \frac{1}{R_1} + \frac{1}{R_2} \quad (28.7)$$

where we have canceled ΔV , ΔV_1 , and ΔV_2 because they are all the same.

An extension of this analysis to three or more resistors in parallel gives

$$\frac{1}{R_{\text{eq}}} = \frac{1}{R_1} + \frac{1}{R_2} + \frac{1}{R_3} + \cdots \quad (28.8)$$

This expression shows that the inverse of the equivalent resistance of two or more resistors in a parallel combination is equal to the sum of the inverses of the indi-

The equivalent resistance of a parallel combination of resistors

vidual resistances. Furthermore, the equivalent resistance is always less than the smallest resistance in the group.

Household circuits are always wired such that the appliances are connected in parallel. Each device operates independently of the others so that if one is switched off, the others remain on. In addition, in this type of connection, all the devices operate on the same voltage.

Let's consider two examples of practical applications of series and parallel circuits. Figure 28.6 illustrates how a three-way incandescent lightbulb is constructed to provide three levels of light intensity.² The socket of the lamp is equipped with a three-way switch for selecting different light intensities. The lightbulb contains two filaments. When the lamp is connected to a 120-V source, one filament receives 100 W of power and the other receives 75 W. The three light intensities are made possible by applying the 120 V to one filament alone, to the other filament alone, or to the two filaments in parallel. When switch S_1 is closed and switch S_2 is opened, current exists only in the 75-W filament. When switch S_1 is open and switch S_2 is closed, current exists only in the 100-W filament. When both switches are closed, current exists in both filaments and the total power is 175 W.

If the filaments were connected in series and one of them were to break, no charges could pass through the lightbulb and it would not glow, regardless of the switch position. If, however, the filaments were connected in parallel and one of them (for example, the 75-W filament) were to break, the lightbulb would continue to glow in two of the switch positions because current exists in the other (100-W) filament.

As a second example, consider strings of incandescent lights that are used for many ornamental purposes such as decorating Christmas trees. Over the years, both parallel and series connections have been used for strings of lights. Because series-wired lightbulbs operate with less energy per bulb and at a lower temperature, they are safer than parallel-wired lightbulbs for indoor Christmas-tree use. If, however, the filament of a single lightbulb in a series-wired string were to fail (or if the lightbulb were removed from its socket), all the lights on the string would go out. The popularity of series-wired light strings diminished because troubleshooting a failed lightbulb is a tedious, time-consuming chore that involves trial-and-error substitution of a good lightbulb in each socket along the string until the defective one is found.

In a parallel-wired string, each lightbulb operates at 120 V. By design, the lightbulbs are brighter and hotter than those on a series-wired string. As a result, they are inherently more dangerous (more likely to start a fire, for instance), but if one lightbulb in a parallel-wired string fails or is removed, the rest of the lightbulbs continue to glow.

To prevent the failure of one lightbulb from causing the entire string to go out, a new design was developed for so-called miniature lights wired in series. When the filament breaks in one of these miniature lightbulbs, the break in the filament represents the largest resistance in the series, much larger than that of the intact filaments. As a result, most of the applied 120 V appears across the lightbulb with the broken filament. Inside the lightbulb, a small jumper loop covered by an insulating material is wrapped around the filament leads. When the filament fails and 120 V appears across the lightbulb, an arc burns the insulation on the jumper and connects the filament leads. This connection now completes the circuit through the lightbulb even though its filament is no longer active (Fig. 28.7, page 840).

When a lightbulb fails, the resistance across its terminals is reduced to almost zero because of the alternate jumper connection mentioned in the preceding paragraph. All the other lightbulbs not only stay on, but they glow more brightly because

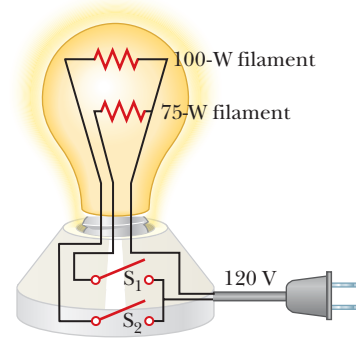


Figure 28.6 A three-way incandescent lightbulb.

²The three-way lightbulb and other household devices actually operate on alternating current (AC), to be introduced in Chapter 33.

Figure 28.7 (a) Schematic diagram of a modern “miniature” incandescent holiday lightbulb, with a jumper connection to provide a current path if the filament breaks. (b) A holiday lightbulb with a broken filament. (c) A Christmas-tree lightbulb.

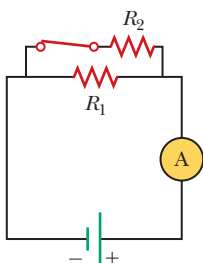
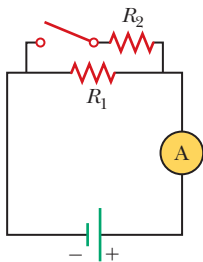
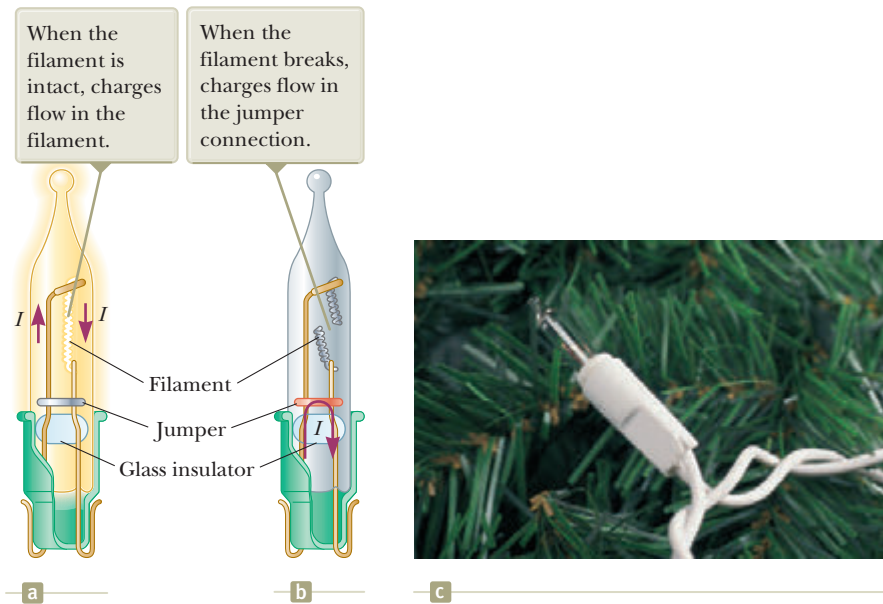


Figure 28.8 (Quick Quiz 28.3) What happens when the switch is closed?

the total resistance of the string is reduced and consequently the current in each remaining lightbulb increases. Each lightbulb operates at a slightly higher temperature than before. As more lightbulbs fail, the current keeps rising, the filament of each remaining lightbulb operates at a higher temperature, and the lifetime of the lightbulb is reduced. For this reason, you should check for failed (nonglowing) lightbulbs in such a series-wired string and replace them as soon as possible, thereby maximizing the lifetimes of all the lightbulbs.

Quick Quiz 28.3 With the switch in the circuit of Figure 28.8a open, there is no current in R_2 . There is current in R_1 , however, and it is measured with the ammeter at the right side of the circuit. If the switch is closed (Fig. 28.8b), there is current in R_2 . What happens to the reading on the ammeter when the switch is closed? (a) The reading increases. (b) The reading decreases. (c) The reading does not change.

Quick Quiz 28.4 Consider the following choices: (a) increases, (b) decreases, (c) remains the same. From these choices, choose the best answer for the following situations. (i) In Figure 28.3, a third resistor is added in series with the first two. What happens to the current in the battery? (ii) What happens to the terminal voltage of the battery? (iii) In Figure 28.5, a third resistor is added in parallel with the first two. What happens to the current in the battery? (iv) What happens to the terminal voltage of the battery?

Conceptual Example 28.3

Landscape Lights

A homeowner wishes to install low-voltage landscape lighting in his back yard. To save money, he purchases inexpensive 18-gauge cable, which has a relatively high resistance per unit length. This cable consists of two side-by-side wires separated by insulation, like the cord on an appliance. He runs a 200-foot length of this cable from the power supply to the farthest point at which he plans to position a light fixture. He attaches light fixtures across the two wires on the cable at 10-foot intervals so that the light fixtures are in parallel. Because of the cable's resistance, the brightness of the lightbulbs in the fixtures is not as desired. Which of the following problems does the homeowner have? (a) All the lightbulbs glow equally less brightly than they would if lower-resistance cable had been used. (b) The brightness of the lightbulbs decreases as you move farther from the power supply.

28.3 continued

SOLUTION

A circuit diagram for the system appears in Figure 28.9. The horizontal resistors with letter subscripts (such as R_A) represent the resistance of the wires in the cable between the light fixtures, and the vertical resistors with number subscripts (such as R_1) represent the resistance of the light fixtures themselves. Part of the terminal voltage of the power supply is dropped across resistors R_A and R_B . Therefore, the voltage across light fixture R_1 is less than the terminal voltage. There is a further voltage drop across resistors R_C and R_D . Consequently, the voltage across light fixture R_2 is smaller than that across R_1 . This pattern continues down the line of light fixtures, so the correct choice is (b). Each successive light fixture has a smaller voltage across it and glows less brightly than the one before.

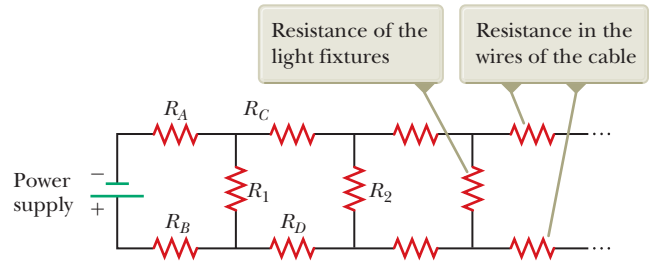


Figure 28.9 (Conceptual Example 28.3) The circuit diagram for a set of landscape light fixtures connected in parallel across the two wires of a two-wire cable.

Example 28.4 Find the Equivalent Resistance

Four resistors are connected as shown in Figure 28.10a.

(A) Find the equivalent resistance between points a and c .

SOLUTION

Conceptualize Imagine charges flowing into and through this combination from the left. All charges must pass from a to b through the first two resistors, but the charges split at b into two different paths when encountering the combination of the $6.0\text{-}\Omega$ and the $3.0\text{-}\Omega$ resistors.

Categorize Because of the simple nature of the combination of resistors in Figure 28.10, we categorize this example as one for which we can use the rules for series and parallel combinations of resistors.

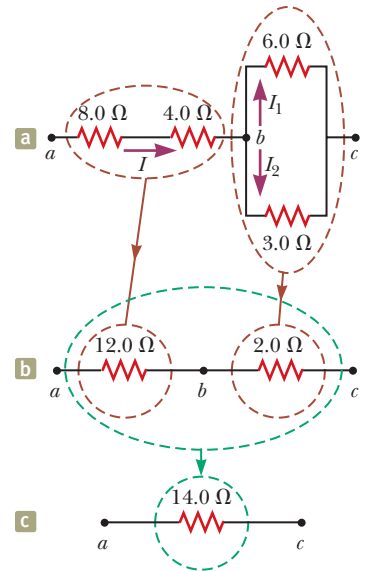


Figure 28.10 (Example 28.4) The original network of resistors is reduced to a single equivalent resistance.

Analyze The combination of resistors can be reduced in steps as shown in Figure 28.10.

Find the equivalent resistance between a and b of the $8.0\text{-}\Omega$ and $4.0\text{-}\Omega$ resistors, which are in series (left-hand red-brown circles):

$$R_{\text{eq}} = 8.0\ \Omega + 4.0\ \Omega = 12.0\ \Omega$$

Find the equivalent resistance between b and c of the $6.0\text{-}\Omega$ and $3.0\text{-}\Omega$ resistors, which are in parallel (right-hand red-brown circles):

$$\frac{1}{R_{\text{eq}}} = \frac{1}{6.0\ \Omega} + \frac{1}{3.0\ \Omega} = \frac{3}{6.0\ \Omega}$$

$$R_{\text{eq}} = \frac{6.0\ \Omega}{3} = 2.0\ \Omega$$

The circuit of equivalent resistances now looks like Figure 28.10b. The $12.0\text{-}\Omega$ and $2.0\text{-}\Omega$ resistors are in series (green circles). Find the equivalent resistance from a to c :

$$R_{\text{eq}} = 12.0\ \Omega + 2.0\ \Omega = 14.0\ \Omega$$

This resistance is that of the single equivalent resistor in Figure 28.10c.

(B) What is the current in each resistor if a potential difference of 42 V is maintained between a and c ?

continued

28.4 continued

SOLUTION

The currents in the 8.0- Ω and 4.0- Ω resistors are the same because they are in series. In addition, they carry the same current that would exist in the 14.0- Ω equivalent resistor subject to the 42-V potential difference.

Use Equation 27.7 ($R = \Delta V/I$) and the result from part (A) to find the current in the 8.0- Ω and 4.0- Ω resistors:

$$I = \frac{\Delta V_{ac}}{R_{eq}} = \frac{42 \text{ V}}{14.0 \Omega} = 3.0 \text{ A}$$

Set the voltages across the resistors in parallel in Figure 28.10a equal to find a relationship between the currents:

$$\Delta V_1 = \Delta V_2 \rightarrow (6.0 \Omega)I_1 = (3.0 \Omega)I_2 \rightarrow I_2 = 2I_1$$

Use $I_1 + I_2 = 3.0 \text{ A}$ to find I_1 :

$$I_1 + I_2 = 3.0 \text{ A} \rightarrow I_1 + 2I_1 = 3.0 \text{ A} \rightarrow I_1 = 1.0 \text{ A}$$

Find I_2 :

$$I_2 = 2I_1 = 2(1.0 \text{ A}) = 2.0 \text{ A}$$

Finalize As a final check of our results, note that $\Delta V_{bc} = (6.0 \Omega)I_1 = (3.0 \Omega)I_2 = 6.0 \text{ V}$ and $\Delta V_{ab} = (12.0 \Omega)I = 36 \text{ V}$; therefore, $\Delta V_{ac} = \Delta V_{ab} + \Delta V_{bc} = 42 \text{ V}$, as it must.

Example 28.5 Three Resistors in Parallel

Three resistors are connected in parallel as shown in Figure 28.11a. A potential difference of 18.0 V is maintained between points a and b .

(A) Calculate the equivalent resistance of the circuit.

SOLUTION

Conceptualize Figure 28.11a shows that we are dealing with a simple parallel combination of three resistors. Notice that the current I splits into three currents I_1 , I_2 , and I_3 in the three resistors.

Categorize This problem can be solved with rules developed in this section, so we categorize it as a substitution problem. Because the three resistors are connected in parallel, we can use the rule for resistors in parallel, Equation 28.8, to evaluate the equivalent resistance.

Use Equation 28.8 to find R_{eq} :

$$\frac{1}{R_{eq}} = \frac{1}{3.00 \Omega} + \frac{1}{6.00 \Omega} + \frac{1}{9.00 \Omega} = \frac{11}{18.0}$$

$$R_{eq} = \frac{18.0 \Omega}{11} = 1.64 \Omega$$

(B) Find the current in each resistor.

SOLUTION

The potential difference across each resistor is 18.0 V. Apply the relationship $\Delta V = IR$ to find the currents:

$$I_1 = \frac{\Delta V}{R_1} = \frac{18.0 \text{ V}}{3.00 \Omega} = 6.00 \text{ A}$$

$$I_2 = \frac{\Delta V}{R_2} = \frac{18.0 \text{ V}}{6.00 \Omega} = 3.00 \text{ A}$$

$$I_3 = \frac{\Delta V}{R_3} = \frac{18.0 \text{ V}}{9.00 \Omega} = 2.00 \text{ A}$$

(C) Calculate the power delivered to each resistor and the total power delivered to the combination of resistors.

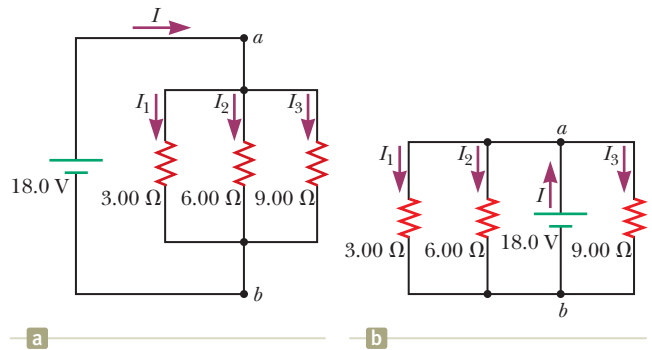


Figure 28.11 (Example 28.5) (a) Three resistors connected in parallel. The voltage across each resistor is 18.0 V. (b) Another circuit with three resistors and a battery. Is it equivalent to the circuit in (a)?

► 28.5 continued

SOLUTION

Apply the relationship $P = I^2R$ to each resistor using the currents calculated in part (B):

$$3.00\text{-}\Omega: P_1 = I_1^2R_1 = (6.00\text{ A})^2(3.00\ \Omega) = 108\text{ W}$$

$$6.00\text{-}\Omega: P_2 = I_2^2R_2 = (3.00\text{ A})^2(6.00\ \Omega) = 54\text{ W}$$

$$9.00\text{-}\Omega: P_3 = I_3^2R_3 = (2.00\text{ A})^2(9.00\ \Omega) = 36\text{ W}$$

These results show that the smallest resistor receives the most power. Summing the three quantities gives a total power of 198 W. We could have calculated this final result from part (A) by considering the equivalent resistance as follows: $P = (\Delta V)^2/R_{\text{eq}} = (18.0\text{ V})^2/1.64\ \Omega = 198\text{ W}$.

WHAT IF? What if the circuit were as shown in Figure 28.11b instead of as in Figure 28.11a? How would that affect the calculation?

Answer There would be no effect on the calculation. The physical placement of the battery is not important. Only the electrical arrangement is important. In Figure 28.11b, the battery still maintains a potential difference of 18.0 V between points *a* and *b*, so the two circuits in the figure are electrically identical.

28.3 Kirchhoff's Rules

As we saw in the preceding section, combinations of resistors can be simplified and analyzed using the expression $\Delta V = IR$ and the rules for series and parallel combinations of resistors. Very often, however, it is not possible to reduce a circuit to a single loop using these rules. The procedure for analyzing more complex circuits is made possible by using the following two principles, called **Kirchhoff's rules**.

1. Junction rule. At any junction, the sum of the currents must equal zero:

$$\sum_{\text{junction}} I = 0 \quad (28.9)$$

2. Loop rule. The sum of the potential differences across all elements around any closed circuit loop must be zero:

$$\sum_{\text{closed loop}} \Delta V = 0 \quad (28.10)$$

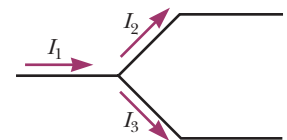
Kirchhoff's first rule is a statement of conservation of electric charge. All charges that enter a given point in a circuit must leave that point because charge cannot build up or disappear at a point. Currents directed into the junction are entered into the sum in the junction rule as $+I$, whereas currents directed out of a junction are entered as $-I$. Applying this rule to the junction in Figure 28.12a gives

$$I_1 - I_2 - I_3 = 0$$

Figure 28.12b represents a mechanical analog of this situation, in which water flows through a branched pipe having no leaks. Because water does not build up anywhere in the pipe, the flow rate into the pipe on the left equals the total flow rate out of the two branches on the right.

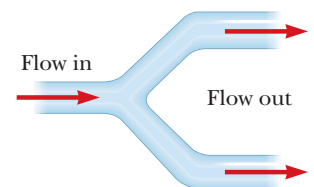
Kirchhoff's second rule follows from the law of conservation of energy for an isolated system. Let's imagine moving a charge around a closed loop of a circuit. When the charge returns to the starting point, the charge-circuit system must have the same total energy as it had before the charge was moved. The sum of the increases in energy as the charge passes through some circuit elements must equal the sum of the decreases in energy as it passes through other elements. The potential energy of the system decreases whenever the charge moves through a potential drop $-IR$ across a resistor or whenever it moves in the reverse direction through a

The amount of charge flowing out of the branches on the right must equal the amount flowing into the single branch on the left.



a

The amount of water flowing out of the branches on the right must equal the amount flowing into the single branch on the left.



b

Figure 28.12 (a) Kirchhoff's junction rule. (b) A mechanical analog of the junction rule.

In each diagram, $\Delta V = V_b - V_a$ and the circuit element is traversed from a to b , left to right.

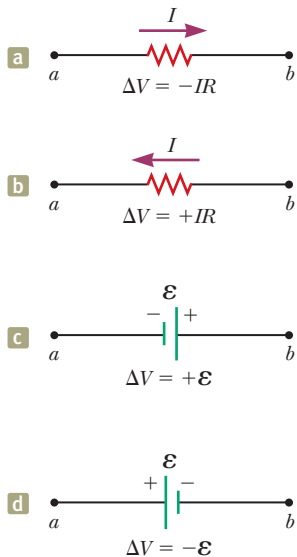


Figure 28.13 Rules for determining the signs of the potential differences across a resistor and a battery. (The battery is assumed to have no internal resistance.)

source of emf. The potential energy increases whenever the charge passes through a battery from the negative terminal to the positive terminal.


When applying Kirchhoff's second rule, imagine *traveling* around the loop and consider changes in *electric potential* rather than the changes in *potential energy* described in the preceding paragraph. Imagine traveling through the circuit elements in Figure 28.13 toward the right. The following sign conventions apply when using the second rule:

- Charges move from the high-potential end of a resistor toward the low-potential end, so if a resistor is traversed in the direction of the current, the potential difference ΔV across the resistor is $-IR$ (Fig. 28.13a).
- If a resistor is traversed in the direction *opposite* the current, the potential difference ΔV across the resistor is $+IR$ (Fig. 28.13b).
- If a source of emf (assumed to have zero internal resistance) is traversed in the direction of the emf (from negative to positive), the potential difference ΔV is $+\mathcal{E}$ (Fig. 28.13c).
- If a source of emf (assumed to have zero internal resistance) is traversed in the direction opposite the emf (from positive to negative), the potential difference ΔV is $-\mathcal{E}$ (Fig. 28.13d).

There are limits on the number of times you can usefully apply Kirchhoff's rules in analyzing a circuit. You can use the junction rule as often as you need as long as you include in it a current that has not been used in a preceding junction-rule equation. In general, the number of times you can use the junction rule is one fewer than the number of junction points in the circuit. You can apply the loop rule as often as needed as long as a new circuit element (resistor or battery) or a new current appears in each new equation. In general, to solve a particular circuit problem, the number of independent equations you need to obtain from the two rules equals the number of unknown currents.

Complex networks containing many loops and junctions generate a great number of independent linear equations and a correspondingly great number of unknowns. Such situations can be handled formally through the use of matrix algebra. Computer software can also be used to solve for the unknowns.

The following examples illustrate how to use Kirchhoff's rules. In all cases, it is assumed the circuits have reached steady-state conditions; in other words, the currents in the various branches are constant. Any capacitor acts as an open branch in a circuit; that is, the current in the branch containing the capacitor is zero under steady-state conditions.



Prints & Photographs Division, Library of Congress, LC-USZ62-133715

Gustav Kirchhoff

German Physicist (1824–1887)

Kirchhoff, a professor at Heidelberg, and Robert Bunsen invented the spectroscope and founded the science of spectroscopy, which we shall study in Chapter 42. They discovered the elements cesium and rubidium and invented astronomical spectroscopy.

Problem-Solving Strategy Kirchhoff's Rules

The following procedure is recommended for solving problems that involve circuits that cannot be reduced by the rules for combining resistors in series or parallel.

- 1. Conceptualize.** Study the circuit diagram and make sure you recognize all elements in the circuit. Identify the polarity of each battery and try to imagine the directions in which the current would exist in the batteries.
- 2. Categorize.** Determine whether the circuit can be reduced by means of combining series and parallel resistors. If so, use the techniques of Section 28.2. If not, apply Kirchhoff's rules according to the *Analyze* step below.
- 3. Analyze.** Assign labels to all known quantities and symbols to all unknown quantities. You must assign *directions* to the currents in each part of the circuit. Although the assignment of current directions is arbitrary, you must adhere *rigorously* to the directions you assign when you apply Kirchhoff's rules.

Apply the junction rule (Kirchhoff's first rule) to all junctions in the circuit except one. Now apply the loop rule (Kirchhoff's second rule) to as many loops in

► **Problem-Solving Strategy** *continued*

the circuit as are needed to obtain, in combination with the equations from the junction rule, as many equations as there are unknowns. To apply this rule, you must choose a direction in which to travel around the loop (either clockwise or counterclockwise) and correctly identify the change in potential as you cross each element. Be careful with signs!

Solve the equations simultaneously for the unknown quantities.

4. Finalize. Check your numerical answers for consistency. Do not be alarmed if any of the resulting currents have a negative value. That only means you have guessed the direction of that current incorrectly, but *its magnitude will be correct*.

Example 28.6 **A Single-Loop Circuit**

A single-loop circuit contains two resistors and two batteries as shown in Figure 28.14. (Neglect the internal resistances of the batteries.) Find the current in the circuit.

SOLUTION

Conceptualize Figure 28.14 shows the polarities of the batteries and a guess at the direction of the current. The 12-V battery is the stronger of the two, so the current should be counterclockwise. Therefore, we expect our guess for the direction of the current to be wrong, but we will continue and see how this incorrect guess is represented by our final answer.

Categorize We do not need Kirchhoff's rules to analyze this simple circuit, but let's use them anyway simply to see how they are applied. There are no junctions in this single-loop circuit; therefore, the current is the same in all elements.

Analyze Let's assume the current is clockwise as shown in Figure 28.14. Traversing the circuit in the clockwise direction, starting at a , we see that $a \rightarrow b$ represents a potential difference of $+\mathcal{E}_1$, $b \rightarrow c$ represents a potential difference of $-IR_1$, $c \rightarrow d$ represents a potential difference of $-\mathcal{E}_2$, and $d \rightarrow a$ represents a potential difference of $-IR_2$.

Apply Kirchhoff's loop rule to the single loop in the circuit:

$$\sum \Delta V = 0 \rightarrow \mathcal{E}_1 - IR_1 - \mathcal{E}_2 - IR_2 = 0$$

Solve for I and use the values given in Figure 28.14:

$$(1) \quad I = \frac{\mathcal{E}_1 - \mathcal{E}_2}{R_1 + R_2} = \frac{6.0 \text{ V} - 12 \text{ V}}{8.0 \, \Omega + 10 \, \Omega} = -0.33 \text{ A}$$

Finalize The negative sign for I indicates that the direction of the current is opposite the assumed direction. The emfs in the numerator subtract because the batteries in Figure 28.14 have opposite polarities. The resistances in the denominator add because the two resistors are in series.

WHAT IF? What if the polarity of the 12.0-V battery were reversed? How would that affect the circuit?

Answer Although we could repeat the Kirchhoff's rules calculation, let's instead examine Equation (1) and modify it accordingly. Because the polarities of the two batteries are now in the same direction, the signs of \mathcal{E}_1 and \mathcal{E}_2 are the same and Equation (1) becomes

$$I = \frac{\mathcal{E}_1 + \mathcal{E}_2}{R_1 + R_2} = \frac{6.0 \text{ V} + 12 \text{ V}}{8.0 \, \Omega + 10 \, \Omega} = 1.0 \text{ A}$$

Example 28.7 **A Multiloop Circuit**

Find the currents I_1 , I_2 , and I_3 in the circuit shown in Figure 28.15 on page 846.

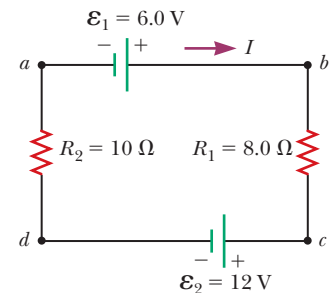


Figure 28.14 (Example 28.6) A series circuit containing two batteries and two resistors, where the polarities of the batteries are in opposition.

continued

28.7 continued

SOLUTION

Conceptualize Imagine physically rearranging the circuit while keeping it electrically the same. Can you rearrange it so that it consists of simple series or parallel combinations of resistors? You should find that you cannot. (If the 10.0-V battery were removed and replaced by a wire from b to the 6.0- Ω resistor, the circuit would consist of only series and parallel combinations.)

Categorize We cannot simplify the circuit by the rules associated with combining resistances in series and in parallel. Therefore, this problem is one in which we must use Kirchhoff's rules.

Analyze We arbitrarily choose the directions of the currents as labeled in Figure 28.15.

Apply Kirchhoff's junction rule to junction c :

$$(1) \quad I_1 + I_2 - I_3 = 0$$

We now have one equation with three unknowns: I_1 , I_2 , and I_3 . There are three loops in the circuit: $abcd$, $befcb$, and $aefta$. We need only two loop equations to determine the unknown currents. (The third equation would give no new information.) Let's choose to traverse these loops in the clockwise direction. Apply Kirchhoff's loop rule to loops $abcd$ and $befcb$:

$$abcd: (2) \quad 10.0 \text{ V} - (6.0 \Omega)I_1 - (2.0 \Omega)I_3 = 0$$

$$befcb: -(4.0 \Omega)I_2 - 14.0 \text{ V} + (6.0 \Omega)I_1 - 10.0 \text{ V} = 0$$

$$(3) \quad -24.0 \text{ V} + (6.0 \Omega)I_1 - (4.0 \Omega)I_2 = 0$$

Solve Equation (1) for I_3 and substitute into Equation (2):

$$10.0 \text{ V} - (6.0 \Omega)I_1 - (2.0 \Omega)(I_1 + I_2) = 0$$

$$(4) \quad 10.0 \text{ V} - (8.0 \Omega)I_1 - (2.0 \Omega)I_2 = 0$$

Multiply each term in Equation (3) by 4 and each term in Equation (4) by 3:

$$(5) \quad -96.0 \text{ V} + (24.0 \Omega)I_1 - (16.0 \Omega)I_2 = 0$$

$$(6) \quad 30.0 \text{ V} - (24.0 \Omega)I_1 - (6.0 \Omega)I_2 = 0$$

Add Equation (6) to Equation (5) to eliminate I_1 and find I_2 :

$$-66.0 \text{ V} - (22.0 \Omega)I_2 = 0$$

$$I_2 = -3.0 \text{ A}$$

Use this value of I_2 in Equation (3) to find I_1 :

$$-24.0 \text{ V} + (6.0 \Omega)I_1 - (4.0 \Omega)(-3.0 \text{ A}) = 0$$

$$-24.0 \text{ V} + (6.0 \Omega)I_1 + 12.0 \text{ V} = 0$$

$$I_1 = 2.0 \text{ A}$$

Use Equation (1) to find I_3 :

$$I_3 = I_1 + I_2 = 2.0 \text{ A} - 3.0 \text{ A} = -1.0 \text{ A}$$

Finalize Because our values for I_2 and I_3 are negative, the directions of these currents are opposite those indicated in Figure 28.15. The numerical values for the currents are correct. Despite the incorrect direction, we *must* continue to use these negative values in subsequent calculations because our equations were established with our original choice of direction. What would have happened had we left the current directions as labeled in Figure 28.15 but traversed the loops in the opposite direction?

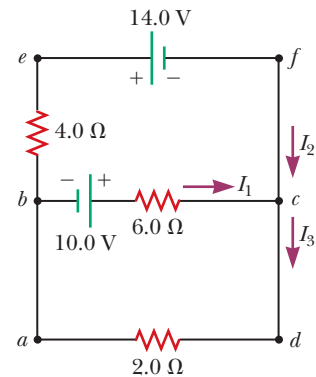


Figure 28.15 (Example 28.7) A circuit containing different branches.

28.4 RC Circuits

So far, we have analyzed direct-current circuits in which the current is constant. In DC circuits containing capacitors, the current is always in the same direction but may vary in magnitude at different times. A circuit containing a series combination of a resistor and a capacitor is called an **RC circuit**.

Charging a Capacitor

Figure 28.16 shows a simple series RC circuit. Let's assume the capacitor in this circuit is initially uncharged. There is no current while the switch is open (Fig. 28.16a). If the switch is thrown to position a at $t = 0$ (Fig. 28.16b), however, charge begins to flow, setting up a current in the circuit, and the capacitor begins to charge.³ Notice that during charging, charges do not jump across the capacitor plates because the gap between the plates represents an open circuit. Instead, charge is transferred between each plate and its connecting wires due to the electric field established in the wires by the battery until the capacitor is fully charged. As the plates are being charged, the potential difference across the capacitor increases. The value of the maximum charge on the plates depends on the voltage of the battery. Once the maximum charge is reached, the current in the circuit is zero because the potential difference across the capacitor matches that supplied by the battery.

To analyze this circuit quantitatively, let's apply Kirchhoff's loop rule to the circuit after the switch is thrown to position a . Traversing the loop in Figure 28.16b clockwise gives

$$\mathcal{E} - \frac{q}{C} - iR = 0 \quad (28.11)$$

where q/C is the potential difference across the capacitor and iR is the potential difference across the resistor. We have used the sign conventions discussed earlier for the signs on \mathcal{E} and iR . The capacitor is traversed in the direction from the positive plate to the negative plate, which represents a decrease in potential. Therefore, we use a negative sign for this potential difference in Equation 28.11. Note that lowercase q and i are *instantaneous* values that depend on time (as opposed to steady-state values) as the capacitor is being charged.

We can use Equation 28.11 to find the initial current I_i in the circuit and the maximum charge Q_{\max} on the capacitor. At the instant the switch is thrown to position a ($t = 0$), the charge on the capacitor is zero. Equation 28.11 shows that the initial current I_i in the circuit is a maximum and is given by

$$I_i = \frac{\mathcal{E}}{R} \quad (\text{current at } t = 0) \quad (28.12)$$

At this time, the potential difference from the battery terminals appears entirely across the resistor. Later, when the capacitor is charged to its maximum value Q_{\max} , charges cease to flow, the current in the circuit is zero, and the potential difference from the battery terminals appears entirely across the capacitor. Substituting $i = 0$ into Equation 28.11 gives the maximum charge on the capacitor:

$$Q_{\max} = C\mathcal{E} \quad (\text{maximum charge}) \quad (28.13)$$

To determine analytical expressions for the time dependence of the charge and current, we must solve Equation 28.11, a single equation containing two variables q and i . The current in all parts of the series circuit must be the same. Therefore, the current in the resistance R must be the same as the current between each capacitor plate and the wire connected to it. This current is equal to the time rate of change of the charge on the capacitor plates. Therefore, we substitute $i = dq/dt$ into Equation 28.11 and rearrange the equation:

$$\frac{dq}{dt} = \frac{\mathcal{E}}{R} - \frac{q}{RC}$$

To find an expression for q , we solve this separable differential equation as follows. First combine the terms on the right-hand side:

$$\frac{dq}{dt} = \frac{C\mathcal{E}}{RC} - \frac{q}{RC} = -\frac{q - C\mathcal{E}}{RC}$$

³In previous discussions of capacitors, we assumed a steady-state situation, in which no current was present in any branch of the circuit containing a capacitor. Now we are considering the case *before* the steady-state condition is realized; in this situation, charges are moving and a current exists in the wires connected to the capacitor.

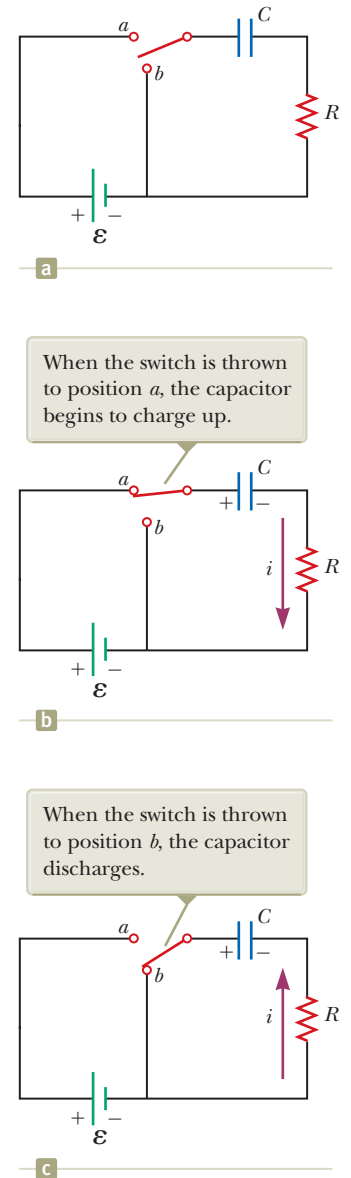


Figure 28.16 A capacitor in series with a resistor, switch, and battery.

Multiply this equation by dt and divide by $q - C\mathcal{E}$:

$$\frac{dq}{q - C\mathcal{E}} = -\frac{1}{RC} dt$$

Integrate this expression, using $q = 0$ at $t = 0$:

$$\int_0^q \frac{dq}{q - C\mathcal{E}} = -\frac{1}{RC} \int_0^t dt$$

$$\ln\left(\frac{q - C\mathcal{E}}{-C\mathcal{E}}\right) = -\frac{t}{RC}$$

From the definition of the natural logarithm, we can write this expression as

$$q(t) = C\mathcal{E}(1 - e^{-t/RC}) = Q_{\max}(1 - e^{-t/RC}) \quad (28.14)$$

Charge as a function of time
for a capacitor being
charged

where e is the base of the natural logarithm and we have made the substitution from Equation 28.13.

We can find an expression for the charging current by differentiating Equation 28.14 with respect to time. Using $i = dq/dt$, we find that

$$i(t) = \frac{\mathcal{E}}{R} e^{-t/RC} \quad (28.15)$$

Current as a function of time
for a capacitor being
charged

Plots of capacitor charge and circuit current versus time are shown in Figure 28.17. Notice that the charge is zero at $t = 0$ and approaches the maximum value $C\mathcal{E}$ as $t \rightarrow \infty$. The current has its maximum value $I_i = \mathcal{E}/R$ at $t = 0$ and decays exponentially to zero as $t \rightarrow \infty$. The quantity RC , which appears in the exponents of Equations 28.14 and 28.15, is called the **time constant** τ of the circuit:

$$\tau = RC \quad (28.16)$$

The time constant represents the time interval during which the current decreases to $1/e$ of its initial value; that is, after a time interval τ , the current decreases to $i = e^{-1}I_i = 0.368I_i$. After a time interval 2τ , the current decreases to $i = e^{-2}I_i = 0.135I_i$, and so forth. Likewise, in a time interval τ , the charge increases from zero to $C\mathcal{E}[1 - e^{-1}] = 0.632C\mathcal{E}$.

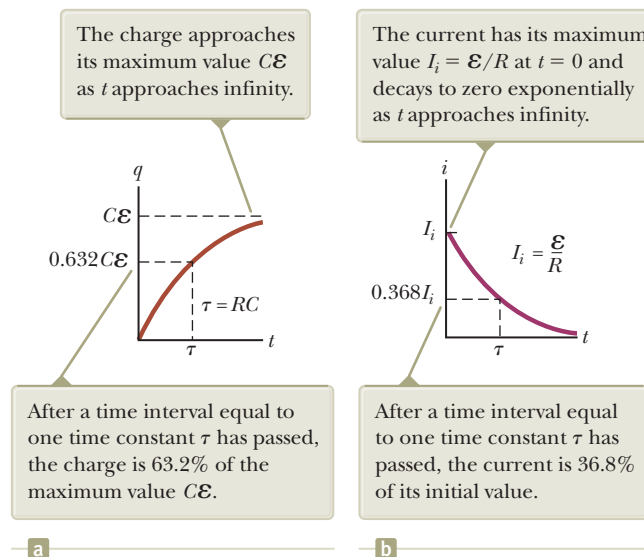


Figure 28.17 (a) Plot of capacitor charge versus time for the circuit shown in Figure 28.16b. (b) Plot of current versus time for the circuit shown in Figure 28.16b.

The following dimensional analysis shows that τ has units of time:

$$[\tau] = [RC] = \left[\left(\frac{\Delta V}{I} \right) \left(\frac{Q}{\Delta V} \right) \right] = \left[\frac{Q}{Q/\Delta t} \right] = [\Delta t] = \text{T}$$

Because $\tau = RC$ has units of time, the combination t/RC is dimensionless, as it must be to be an exponent of e in Equations 28.14 and 28.15.

The energy supplied by the battery during the time interval required to fully charge the capacitor is $Q_{\text{max}}\mathcal{E} = C\mathcal{E}^2$. After the capacitor is fully charged, the energy stored in the capacitor is $\frac{1}{2}Q_{\text{max}}\mathcal{E} = \frac{1}{2}C\mathcal{E}^2$, which is only half the energy output of the battery. It is left as a problem (Problem 68) to show that the remaining half of the energy supplied by the battery appears as internal energy in the resistor.

Discharging a Capacitor

Imagine that the capacitor in Figure 28.16b is completely charged. An initial potential difference Q_i/C exists across the capacitor, and there is zero potential difference across the resistor because $i = 0$. If the switch is now thrown to position b at $t = 0$ (Fig. 28.16c), the capacitor begins to discharge through the resistor. At some time t during the discharge, the current in the circuit is i and the charge on the capacitor is q . The circuit in Figure 28.16c is the same as the circuit in Figure 28.16b except for the absence of the battery. Therefore, we eliminate the emf \mathcal{E} from Equation 28.11 to obtain the appropriate loop equation for the circuit in Figure 28.16c:

$$-\frac{q}{C} - iR = 0 \quad (28.17)$$

When we substitute $i = dq/dt$ into this expression, it becomes

$$\begin{aligned} -R \frac{dq}{dt} &= \frac{q}{C} \\ \frac{dq}{q} &= -\frac{1}{RC} dt \end{aligned}$$

Integrating this expression using $q = Q_i$ at $t = 0$ gives

$$\begin{aligned} \int_{Q_i}^q \frac{dq}{q} &= -\frac{1}{RC} \int_0^t dt \\ \ln \left(\frac{q}{Q_i} \right) &= -\frac{t}{RC} \end{aligned}$$

$$q(t) = Q_i e^{-t/RC} \quad (28.18)$$

Differentiating Equation 28.18 with respect to time gives the instantaneous current as a function of time:

$$i(t) = -\frac{Q_i}{RC} e^{-t/RC} \quad (28.19)$$

where $Q_i/RC = I_i$ is the initial current. The negative sign indicates that as the capacitor discharges, the current direction is opposite its direction when the capacitor was being charged. (Compare the current directions in Figs. 28.16b and 28.16c.) Both the charge on the capacitor and the current decay exponentially at a rate characterized by the time constant $\tau = RC$.

- Quick Quiz 28.5** Consider the circuit in Figure 28.18 and assume the battery has no internal resistance. (i) Just after the switch is closed, what is the current in the battery? (a) 0 (b) $\mathcal{E}/2R$ (c) $2\mathcal{E}/R$ (d) \mathcal{E}/R (e) impossible to determine (ii) After a very long time, what is the current in the battery? Choose from the same choices.

◀ Charge as a function of time for a discharging capacitor

◀ Current as a function of time for a discharging capacitor

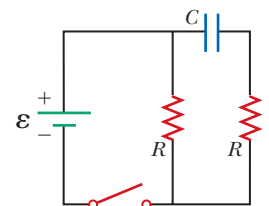


Figure 28.18 (Quick Quiz 28.5) How does the current vary after the switch is closed?

Conceptual Example 28.8 Intermittent Windshield Wipers

Many automobiles are equipped with windshield wipers that can operate intermittently during a light rainfall. How does the operation of such wipers depend on the charging and discharging of a capacitor?

SOLUTION

The wipers are part of an RC circuit whose time constant can be varied by selecting different values of R through a multiposition switch. As the voltage across the capacitor increases, the capacitor reaches a point at which it discharges and triggers the wipers. The circuit then begins another charging cycle. The time interval between the individual sweeps of the wipers is determined by the value of the time constant.

Example 28.9 Charging a Capacitor in an RC Circuit

An uncharged capacitor and a resistor are connected in series to a battery as shown in Figure 28.16, where $\mathcal{E} = 12.0$ V, $C = 5.00$ μF , and $R = 8.00 \times 10^5$ Ω . The switch is thrown to position a . Find the time constant of the circuit, the maximum charge on the capacitor, the maximum current in the circuit, and the charge and current as functions of time.

SOLUTION

Conceptualize Study Figure 28.16 and imagine throwing the switch to position a as shown in Figure 28.16b. Upon doing so, the capacitor begins to charge.

Categorize We evaluate our results using equations developed in this section, so we categorize this example as a substitution problem.

Evaluate the time constant of the circuit from Equation 28.16:

$$\tau = RC = (8.00 \times 10^5 \Omega)(5.00 \times 10^{-6} \text{ F}) = 4.00 \text{ s}$$

Evaluate the maximum charge on the capacitor from Equation 28.13:

$$Q_{\text{max}} = C\mathcal{E} = (5.00 \mu\text{F})(12.0 \text{ V}) = 60.0 \mu\text{C}$$

Evaluate the maximum current in the circuit from Equation 28.12:

$$I_i = \frac{\mathcal{E}}{R} = \frac{12.0 \text{ V}}{8.00 \times 10^5 \Omega} = 15.0 \mu\text{A}$$

Use these values in Equations 28.14 and 28.15 to find the charge and current as functions of time:

$$(1) \quad q(t) = 60.0(1 - e^{-t/4.00})$$

$$(2) \quad i(t) = 15.0e^{-t/4.00}$$

In Equations (1) and (2), q is in microcoulombs, i is in microamperes, and t is in seconds.

Example 28.10 Discharging a Capacitor in an RC Circuit

Consider a capacitor of capacitance C that is being discharged through a resistor of resistance R as shown in Figure 28.16c.

(A) After how many time constants is the charge on the capacitor one-fourth its initial value?

SOLUTION

Conceptualize Study Figure 28.16 and imagine throwing the switch to position b as shown in Figure 28.16c. Upon doing so, the capacitor begins to discharge.

Categorize We categorize the example as one involving a discharging capacitor and use the appropriate equations.

28.10 continued

Analyze Substitute $q(t) = Q_i/4$ into Equation 28.18:

$$\frac{Q_i}{4} = Q_i e^{-t/RC}$$

$$\frac{1}{4} = e^{-t/RC}$$

Take the logarithm of both sides of the equation and solve for t :

$$-\ln 4 = -\frac{t}{RC}$$

$$t = RC \ln 4 = 1.39RC = 1.39\tau$$

(B) The energy stored in the capacitor decreases with time as the capacitor discharges. After how many time constants is this stored energy one-fourth its initial value?

SOLUTION

Use Equations 26.11 and 28.18 to express the energy stored in the capacitor at any time t :

$$(1) \quad U(t) = \frac{q^2}{2C} = \frac{Q_i^2}{2C} e^{-2t/RC}$$

Substitute $U(t) = \frac{1}{4}(Q_i^2/2C)$ into Equation (1):

$$\frac{1}{4} \frac{Q_i^2}{2C} = \frac{Q_i^2}{2C} e^{-2t/RC}$$

$$\frac{1}{4} = e^{-2t/RC}$$

Take the logarithm of both sides of the equation and solve for t :

$$-\ln 4 = -\frac{2t}{RC}$$

$$t = \frac{1}{2}RC \ln 4 = 0.693RC = 0.693\tau$$

Finalize Notice that because the energy depends on the square of the charge, the energy in the capacitor drops more rapidly than the charge on the capacitor.

WHAT IF? What if you want to describe the circuit in terms of the time interval required for the charge to fall to one-half its original value rather than by the time constant τ ? That would give a parameter for the circuit called its *half-life* $t_{1/2}$. How is the half-life related to the time constant?

Answer In one half-life, the charge falls from Q_i to $Q_i/2$. Therefore, from Equation 28.18,

$$\frac{Q_i}{2} = Q_i e^{-t_{1/2}/RC} \rightarrow \frac{1}{2} = e^{-t_{1/2}/RC}$$

which leads to

$$t_{1/2} = 0.693\tau$$

The concept of half-life will be important to us when we study nuclear decay in Chapter 44. The radioactive decay of an unstable sample behaves in a mathematically similar manner to a discharging capacitor in an RC circuit.

Example 28.11 Energy Delivered to a Resistor **AM**

A $5.00\text{-}\mu\text{F}$ capacitor is charged to a potential difference of 800 V and then discharged through a resistor. How much energy is delivered to the resistor in the time interval required to fully discharge the capacitor?

SOLUTION

Conceptualize In Example 28.10, we considered the energy decrease in a discharging capacitor to a value of one-fourth the initial energy. In this example, the capacitor fully discharges.

Categorize We solve this example using two approaches. The first approach is to model the circuit as an *isolated system* for *energy*. Because energy in an isolated system is conserved, the initial electric potential energy U_E stored in the

continued

► 28.11 continued

capacitor is transformed into internal energy $E_{\text{int}} = E_R$ in the resistor. The second approach is to model the resistor as a *nonisolated system for energy*. Energy enters the resistor by electrical transmission from the capacitor, causing an increase in the resistor's internal energy.

Analyze We begin with the isolated system approach.

Write the appropriate reduction of the conservation of energy equation, Equation 8.2:

$$\Delta U + \Delta E_{\text{int}} = 0$$

Substitute the initial and final values of the energies:

$$(0 - U_E) + (E_{\text{int}} - 0) = 0 \rightarrow E_R = U_E$$

Use Equation 26.11 for the electric potential energy in the capacitor:

$$E_R = \frac{1}{2}C\mathcal{E}^2$$

Substitute numerical values:

$$E_R = \frac{1}{2}(5.00 \times 10^{-6} \text{ F})(800 \text{ V})^2 = \mathbf{1.60 \text{ J}}$$

The second approach, which is more difficult but perhaps more instructive, is to note that as the capacitor discharges through the resistor, the rate at which energy is delivered to the resistor by electrical transmission is i^2R , where i is the instantaneous current given by Equation 28.19.

Evaluate the energy delivered to the resistor by integrating the power over all time because it takes an infinite time interval for the capacitor to completely discharge:

$$P = \frac{dE}{dt} \rightarrow E_R = \int_0^{\infty} P dt$$

Substitute for the power delivered to the resistor:

$$E_R = \int_0^{\infty} i^2 R dt$$

Substitute for the current from Equation 28.19:

$$E_R = \int_0^{\infty} \left(-\frac{Q_i}{RC} e^{-t/RC} \right)^2 R dt = \frac{Q_i^2}{RC^2} \int_0^{\infty} e^{-2t/RC} dt = \frac{\mathcal{E}^2}{R} \int_0^{\infty} e^{-2t/RC} dt$$

Substitute the value of the integral, which is $RC/2$ (see Problem 44):

$$E_R = \frac{\mathcal{E}^2}{R} \left(\frac{RC}{2} \right) = \frac{1}{2}C\mathcal{E}^2$$

Finalize This result agrees with that obtained using the isolated system approach, as it must. We can use this second approach to find the total energy delivered to the resistor at *any* time after the switch is closed by simply replacing the upper limit in the integral with that specific value of t .

28.5 Household Wiring and Electrical Safety

Many considerations are important in the design of an electrical system of a home that will provide adequate electrical service for the occupants while maximizing their safety. We discuss some aspects of a home electrical system in this section.

Household Wiring

Household circuits represent a practical application of some of the ideas presented in this chapter. In our world of electrical appliances, it is useful to understand the power requirements and limitations of conventional electrical systems and the safety measures that prevent accidents.

In a conventional installation, the utility company distributes electric power to individual homes by means of a pair of wires, with each home connected in paral-

labeled to these wires. One wire is called the *live wire*⁴ as illustrated in Figure 28.19, and the other is called the *neutral wire*. The neutral wire is grounded; that is, its electric potential is taken to be zero. The potential difference between the live and neutral wires is approximately 120 V. This voltage alternates in time, and the potential of the live wire oscillates relative to ground. Much of what we have learned so far for the constant-emf situation (direct current) can also be applied to the alternating current that power companies supply to businesses and households. (Alternating voltage and current are discussed in Chapter 33.)

To record a household's energy consumption, a meter is connected in series with the live wire entering the house. After the meter, the wire splits so that there are several separate circuits in parallel distributed throughout the house. Each circuit contains a circuit breaker (or, in older installations, a fuse). A circuit breaker is a special switch that opens if the current exceeds the rated value for the circuit breaker. The wire and circuit breaker for each circuit are carefully selected to meet the current requirements for that circuit. If a circuit is to carry currents as large as 30 A, a heavy wire and an appropriate circuit breaker must be selected to handle this current. A circuit used to power only lamps and small appliances often requires only 20 A. Each circuit has its own circuit breaker to provide protection for that part of the entire electrical system of the house.

As an example, consider a circuit in which a toaster oven, a microwave oven, and a coffee maker are connected (corresponding to R_1 , R_2 , and R_3 in Fig. 28.19). We can calculate the current in each appliance by using the expression $P = I \Delta V$. The toaster oven, rated at 1 000 W, draws a current of $1\,000\text{ W}/120\text{ V} = 8.33\text{ A}$. The microwave oven, rated at 1 300 W, draws 10.8 A, and the coffee maker, rated at 800 W, draws 6.67 A. When the three appliances are operated simultaneously, they draw a total current of 25.8 A. Therefore, the circuit must be wired to handle at least this much current. If the rating of the circuit breaker protecting the circuit is too small—say, 20 A—the breaker will be tripped when the third appliance is turned on, preventing all three appliances from operating. To avoid this situation, the toaster oven and coffee maker can be operated on one 20-A circuit and the microwave oven on a separate 20-A circuit.

Many heavy-duty appliances such as electric ranges and clothes dryers require 240 V for their operation. The power company supplies this voltage by providing a third wire that is 120 V below ground potential (Fig. 28.20). The potential difference between this live wire and the other live wire (which is 120 V above ground potential) is 240 V. An appliance that operates from a 240-V line requires half as much current compared with operating it at 120 V; therefore, smaller wires can be used in the higher-voltage circuit without overheating.

Electrical Safety

When the live wire of an electrical outlet is connected directly to ground, the circuit is completed and a *short-circuit condition* exists. A short circuit occurs when almost zero resistance exists between two points at different potentials, and the result is a very large current. When that happens accidentally, a properly operating circuit breaker opens the circuit and no damage is done. A person in contact with ground, however, can be electrocuted by touching the live wire of a frayed cord or other exposed conductor. An exceptionally effective (and dangerous!) ground contact is made when the person either touches a water pipe (normally at ground potential) or stands on the ground with wet feet. The latter situation represents effective ground contact because normal, nondistilled water is a conductor due to the large number of ions associated with impurities. This situation should be avoided at all cost.

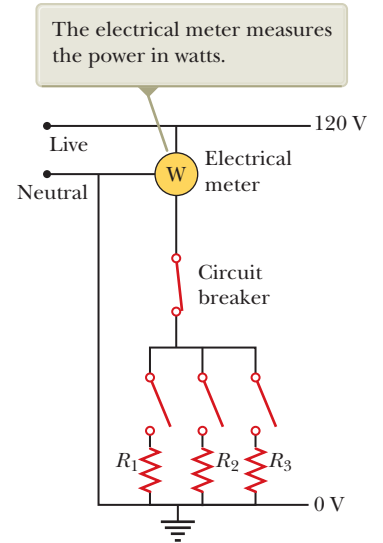


Figure 28.19 Wiring diagram for a household circuit. The resistances represent appliances or other electrical devices that operate with an applied voltage of 120 V.

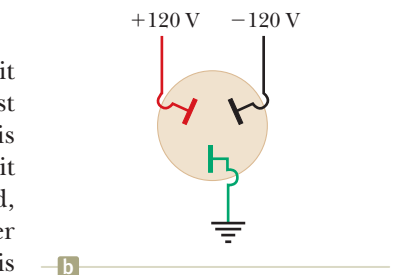
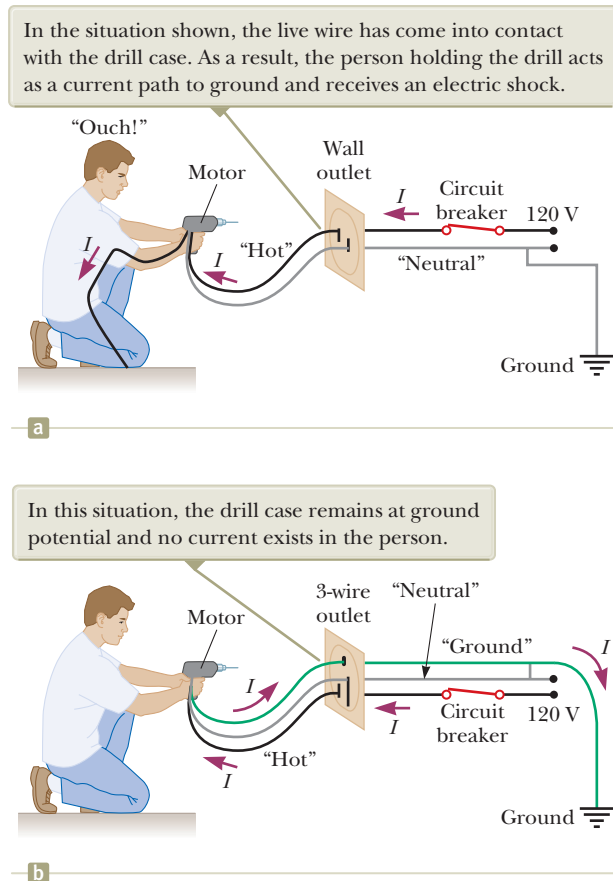


Figure 28.20 (a) An outlet for connection to a 240-V supply. (b) The connections for each of the openings in a 240-V outlet.

⁴*Live wire* is a common expression for a conductor whose electric potential is above or below ground potential.

Figure 28.21 (a) A diagram of the circuit for an electric drill with only two connecting wires. The normal current path is from the live wire through the motor connections and back to ground through the neutral wire. (b) This shock can be avoided by connecting the drill case to ground through a third ground wire. The wire colors represent electrical standards in the United States: the “hot” wire is black, the ground wire is green, and the neutral wire is white (shown as gray in the figure).



Electric shock can result in fatal burns or can cause the muscles of vital organs such as the heart to malfunction. The degree of damage to the body depends on the magnitude of the current, the length of time it acts, the part of the body touched by the live wire, and the part of the body in which the current exists. Currents of 5 mA or less cause a sensation of shock, but ordinarily do little or no damage. If the current is larger than about 10 mA, the muscles contract and the person may be unable to release the live wire. If the body carries a current of about 100 mA for only a few seconds, the result can be fatal. Such a large current paralyzes the respiratory muscles and prevents breathing. In some cases, currents of approximately 1 A can produce serious (and sometimes fatal) burns. In practice, no contact with live wires is regarded as safe whenever the voltage is greater than 24 V.

Many 120-V outlets are designed to accept a three-pronged power cord. (This feature is required in all new electrical installations.) One of these prongs is the live wire at a nominal potential of 120 V. The second is the neutral wire, nominally at 0 V, which carries current to ground. Figure 28.21a shows a connection to an electric drill with only these two wires. If the live wire accidentally makes contact with the casing of the electric drill (which can occur if the wire insulation wears off), current can be carried to ground by way of the person, resulting in an electric shock. The third wire in a three-pronged power cord, the round prong, is a safety ground wire that normally carries no current. It is both grounded and connected directly to the casing of the appliance. If the live wire is accidentally shorted to the casing in this situation, most of the current takes the low-resistance path through the appliance to ground as shown in Figure 28.21b.

Special power outlets called *ground-fault circuit interrupters*, or GFCIs, are used in kitchens, bathrooms, basements, exterior outlets, and other hazardous areas of homes. These devices are designed to protect persons from electric shock by sensing small currents (< 5 mA) leaking to ground. (The principle of their operation

is described in Chapter 31.) When an excessive leakage current is detected, the current is shut off in less than 1 ms.

Summary

Definition

The **emf** of a battery is equal to the voltage across its terminals when the current is zero. That is, the emf is equivalent to the **open-circuit voltage** of the battery.

Concepts and Principles

The **equivalent resistance** of a set of resistors connected in a **series combination** is

$$R_{\text{eq}} = R_1 + R_2 + R_3 + \cdots \quad (28.6)$$

The **equivalent resistance** of a set of resistors connected in a **parallel combination** is found from the relationship

$$\frac{1}{R_{\text{eq}}} = \frac{1}{R_1} + \frac{1}{R_2} + \frac{1}{R_3} + \cdots \quad (28.8)$$

Circuits involving more than one loop are conveniently analyzed with the use of **Kirchhoff's rules**:

1. Junction rule. At any junction, the sum of the currents must equal zero:

$$\sum_{\text{junction}} I = 0 \quad (28.9)$$

2. Loop rule. The sum of the potential differences across all elements around any circuit loop must be zero:

$$\sum_{\text{closed loop}} \Delta V = 0 \quad (28.10)$$

When a resistor is traversed in the direction of the current, the potential difference ΔV across the resistor is $-IR$. When a resistor is traversed in the direction opposite the current, $\Delta V = +IR$. When a source of emf is traversed in the direction of the emf (negative terminal to positive terminal), the potential difference is $+\mathcal{E}$. When a source of emf is traversed opposite the emf (positive to negative), the potential difference is $-\mathcal{E}$.

If a capacitor is charged with a battery through a resistor of resistance R , the charge on the capacitor and the current in the circuit vary in time according to the expressions

$$q(t) = Q_{\text{max}}(1 - e^{-t/RC}) \quad (28.14)$$

$$i(t) = \frac{\mathcal{E}}{R} e^{-t/RC} \quad (28.15)$$

where $Q_{\text{max}} = C\mathcal{E}$ is the maximum charge on the capacitor. The product RC is called the **time constant** τ of the circuit.

If a charged capacitor of capacitance C is discharged through a resistor of resistance R , the charge and current decrease exponentially in time according to the expressions

$$q(t) = Q_i e^{-t/RC} \quad (28.18)$$

$$i(t) = -\frac{Q_i}{RC} e^{-t/RC} \quad (28.19)$$

where Q_i is the initial charge on the capacitor and Q_i/RC is the initial current in the circuit.

Objective Questions

1. denotes answer available in *Student Solutions Manual/Study Guide*

- Is a circuit breaker wired (a) in series with the device it is protecting, (b) in parallel, or (c) neither in series or in parallel, or (d) is it impossible to tell?
- A battery has some internal resistance. **(i)** Can the potential difference across the terminals of the battery be equal to its emf? (a) no (b) yes, if the battery

is absorbing energy by electrical transmission (c) yes, if more than one wire is connected to each terminal (d) yes, if the current in the battery is zero (e) yes, with no special condition required. **(ii)** Can the terminal voltage exceed the emf? Choose your answer from the same possibilities as in part (i).

3. The terminals of a battery are connected across two resistors in series. The resistances of the resistors are not the same. Which of the following statements are correct? Choose all that are correct. (a) The resistor with the smaller resistance carries more current than the other resistor. (b) The resistor with the larger resistance carries less current than the other resistor. (c) The current in each resistor is the same. (d) The potential difference across each resistor is the same. (e) The potential difference is greatest across the resistor closest to the positive terminal.
4. When operating on a 120-V circuit, an electric heater receives 1.30×10^3 W of power, a toaster receives 1.00×10^3 W, and an electric oven receives 1.54×10^3 W. If all three appliances are connected in parallel on a 120-V circuit and turned on, what is the total current drawn from an external source? (a) 24.0 A (b) 32.0 A (c) 40.0 A (d) 48.0 A (e) none of those answers
5. If the terminals of a battery with zero internal resistance are connected across two identical resistors in series, the total power delivered by the battery is 8.00 W. If the same battery is connected across the same resistors in parallel, what is the total power delivered by the battery? (a) 16.0 W (b) 32.0 W (c) 2.00 W (d) 4.00 W (e) none of those answers
6. Several resistors are connected in series. Which of the following statements is correct? Choose all that are correct. (a) The equivalent resistance is greater than any of the resistances in the group. (b) The equivalent resistance is less than any of the resistances in the group. (c) The equivalent resistance depends on the voltage applied across the group. (d) The equivalent resistance is equal to the sum of the resistances in the group. (e) None of those statements is correct.
7. What is the time constant of the circuit shown in Figure OQ28.7? Each of the five resistors has resistance R , and each of the five capacitors has capacitance C . The internal resistance of the battery is negligible. (a) RC (b) $5RC$ (c) $10RC$ (d) $25RC$ (e) none of those answers

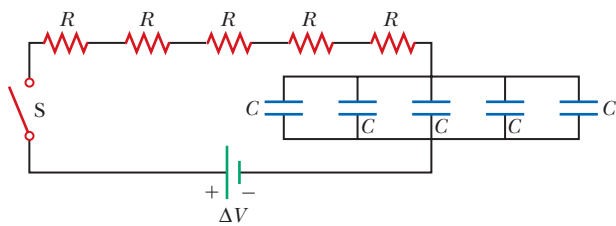


Figure OQ28.7

8. When resistors with different resistances are connected in series, which of the following must be the same for each resistor? Choose all correct answers. (a) potential difference (b) current (c) power delivered (d) charge entering each resistor in a given time interval (e) none of those answers
9. When resistors with different resistances are connected in parallel, which of the following must be the same for each resistor? Choose all correct answers. (a) potential

difference (b) current (c) power delivered (d) charge entering each resistor in a given time interval (e) none of those answers

10. The terminals of a battery are connected across two resistors in parallel. The resistances of the resistors are not the same. Which of the following statements is correct? Choose all that are correct. (a) The resistor with the larger resistance carries more current than the other resistor. (b) The resistor with the larger resistance carries less current than the other resistor. (c) The potential difference across each resistor is the same. (d) The potential difference across the larger resistor is greater than the potential difference across the smaller resistor. (e) The potential difference is greater across the resistor closer to the battery.
11. Are the two headlights of a car wired (a) in series with each other, (b) in parallel, or (c) neither in series nor in parallel, or (d) is it impossible to tell?
12. In the circuit shown in Figure OQ28.12, each battery is delivering energy to the circuit by electrical transmission. All the resistors have equal resistance. (i) Rank the electric potentials at points a , b , c , d , and e from highest to lowest, noting any cases of equality in the ranking. (ii) Rank the magnitudes of the currents at the same points from greatest to least, noting any cases of equality.

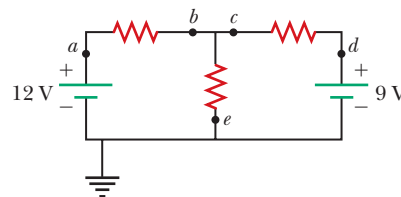


Figure OQ28.12

13. Several resistors are connected in parallel. Which of the following statements are correct? Choose all that are correct. (a) The equivalent resistance is greater than any of the resistances in the group. (b) The equivalent resistance is less than any of the resistances in the group. (c) The equivalent resistance depends on the voltage applied across the group. (d) The equivalent resistance is equal to the sum of the resistances in the group. (e) None of those statements is correct.
14. A circuit consists of three identical lamps connected to a battery as in Figure OQ28.14. The battery has some internal resistance. The switch S , originally open, is closed. (i) What then happens to the brightness of lamp B? (a) It increases. (b) It decreases somewhat. (c) It does not change. (d) It drops to zero. For parts (ii) to (vi), choose from the same possibilities (a) through (d). (ii) What happens to the brightness of lamp C? (iii) What happens to the current in the battery? (iv) What happens to the potential difference across lamp A? (v) What happens to the potential difference

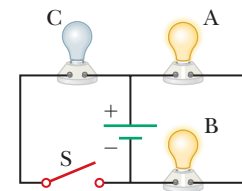


Figure OQ28.14

across lamp C? (vi) What happens to the total power delivered to the lamps by the battery?

15. A series circuit consists of three identical lamps connected to a battery as shown in Figure OQ28.15. The switch S, originally open, is closed. (i) What then happens to the brightness of lamp B? (a) It increases. (b) It decreases somewhat. (c) It does not change. (d) It drops to zero. For parts (ii) to (vi), choose from the same possibilities (a) through (d). (ii) What happens to the brightness of lamp C? (iii) What happens to the current in the battery? (iv) What happens to the potential difference across

lamp A? (v) What happens to the potential difference across lamp C? (vi) What happens to the total power delivered to the lamps by the battery?

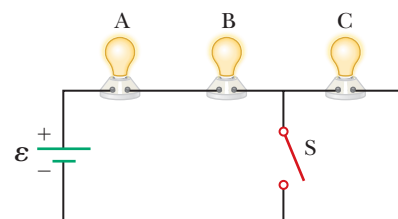


Figure OQ28.15

Conceptual Questions

1. denotes answer available in *Student Solutions Manual/Study Guide*

- Suppose a parachutist lands on a high-voltage wire and grabs the wire as she prepares to be rescued. (a) Will she be electrocuted? (b) If the wire then breaks, should she continue to hold onto the wire as she falls to the ground? Explain.
- A student claims that the second of two lightbulbs in series is less bright than the first because the first lightbulb uses up some of the current. How would you respond to this statement?
- Why is it possible for a bird to sit on a high-voltage wire without being electrocuted?
- Given three lightbulbs and a battery, sketch as many different electric circuits as you can.
- A ski resort consists of a few chairlifts and several interconnected downhill runs on the side of a mountain, with a lodge at the bottom. The chairlifts are analogous to batteries, and the runs are analogous to resistors. Describe how two runs can be in series. Describe how three runs can be in parallel. Sketch a junction between one chairlift and two runs. State Kirchhoff's junction rule for ski resorts. One of the skiers happens to be carrying a skydiver's altimeter. She never takes the same set of chairlifts and runs twice, but keeps passing you at the fixed location where you are working. State Kirchhoff's loop rule for ski resorts.

- Referring to Figure CQ28.6, describe what happens to the lightbulb after the switch is closed. Assume the capacitor has a large capacitance and is initially uncharged. Also assume the light illuminates when connected directly across the battery terminals.

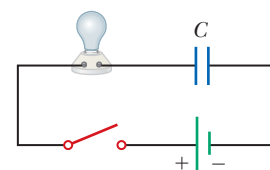


Figure CQ28.6

- So that your grandmother can listen to *A Prairie Home Companion*, you take her bedside radio to the hospital where she is staying. You are required to have a maintenance worker test the radio for electrical safety. Finding that it develops 120 V on one of its knobs, he does not let you take it to your grandmother's room. Your grandmother complains that she has had the radio for many years and nobody has ever gotten a shock from it. You end up having to buy a new plastic radio. (a) Why is your grandmother's old radio dangerous in a hospital room? (b) Will the old radio be safe back in her bedroom?
- (a) What advantage does 120-V operation offer over 240 V? (b) What disadvantages does it have?
- Is the direction of current in a battery always from the negative terminal to the positive terminal? Explain.
- Compare series and parallel resistors to the series and parallel rods in Figure 20.13 on page 610. How are the situations similar?

Problems

ENHANCED WebAssign The problems found in this chapter may be assigned online in Enhanced WebAssign

1. straightforward; 2. intermediate;
3. challenging

1. full solution available in the *Student Solutions Manual/Study Guide*

AMT Analysis Model tutorial available in Enhanced WebAssign

GP Guided Problem

M Master It tutorial available in Enhanced WebAssign

W Watch It video solution available in Enhanced WebAssign

Section 28.1 Electromotive Force

- A battery has an emf of 15.0 V. The terminal voltage of the battery is 11.6 V when it is delivering 20.0 W of

power to an external load resistor R . (a) What is the value of R ? (b) What is the internal resistance of the battery?

- 2.** Two 1.50-V batteries—with their positive terminals in the same direction—are inserted in series into a flashlight. One battery has an internal resistance of $0.255\ \Omega$, and the other has an internal resistance of $0.153\ \Omega$. When the switch is closed, the bulb carries a current of 600 mA. (a) What is the bulb's resistance? (b) What fraction of the chemical energy transformed appears as internal energy in the batteries?
- 3.** An automobile battery has an emf of 12.6 V and an internal resistance of $0.080\ \Omega$. The headlights together have an equivalent resistance of $5.00\ \Omega$ (assumed constant). What is the potential difference across the headlight bulbs (a) when they are the only load on the battery and (b) when the starter motor is operated, with 35.0 A of current in the motor?
- 4.** As in Example 28.2, consider a power supply with fixed emf \mathcal{E} and internal resistance r causing current in a load resistance R . In this problem, R is fixed and r is a variable. The efficiency is defined as the energy delivered to the load divided by the energy delivered by the emf. (a) When the internal resistance is adjusted for maximum power transfer, what is the efficiency? (b) What should be the internal resistance for maximum possible efficiency? (c) When the electric company sells energy to a customer, does it have a goal of high efficiency or of maximum power transfer? Explain. (d) When a student connects a loudspeaker to an amplifier, does she most want high efficiency or high power transfer? Explain.

Section 28.2 Resistors in Series and Parallel

- 5.** Three $100\text{-}\Omega$ resistors are connected as shown in Figure P28.5. The maximum power that can safely be delivered to any one resistor is 25.0 W. (a) What is the maximum potential difference that can be applied to the terminals a and b ? (b) For the voltage determined in part (a), what is the power delivered to each resistor? (c) What is the total power delivered to the combination of resistors?

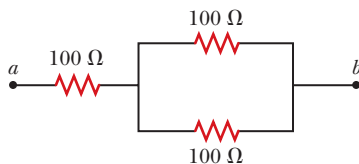


Figure P28.5

- 6.** A lightbulb marked “75 W [at] 120 V” is screwed into a socket at one end of a long extension cord, in which each of the two conductors has resistance $0.800\ \Omega$. The other end of the extension cord is plugged into a 120-V outlet. (a) Explain why the actual power delivered to the lightbulb cannot be 75 W in this situation. (b) Draw a circuit diagram. (c) Find the actual power delivered to the lightbulb in this circuit.
- 7.** What is the equivalent resistance of the combination of identical resistors between points a and b in Figure P28.7?

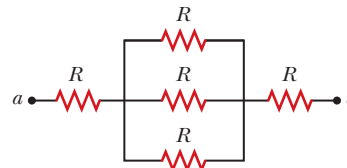


Figure P28.7

- 8.** Consider the two circuits shown in Figure P28.8 in which the batteries are identical. The resistance of each lightbulb is R . Neglect the internal resistances of the batteries. (a) Find expressions for the currents in each lightbulb. (b) How does the brightness of B compare with that of C? Explain. (c) How does the brightness of A compare with that of B and of C? Explain.

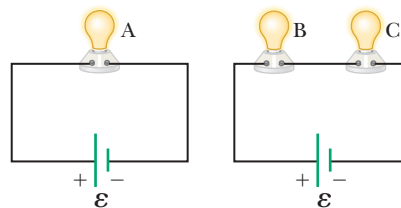


Figure P28.8

- 9.** Consider the circuit shown in Figure P28.9. Find (a) the current in the $20.0\text{-}\Omega$ resistor and (b) the potential difference between points a and b .

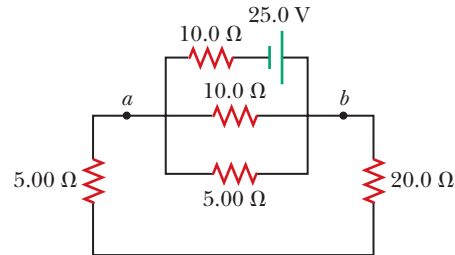


Figure P28.9

- 10.** (a) You need a $45\text{-}\Omega$ resistor, but the stockroom has only $20\text{-}\Omega$ and $50\text{-}\Omega$ resistors. How can the desired resistance be achieved under these circumstances? (b) What can you do if you need a $35\text{-}\Omega$ resistor?
- 11.** A battery with $\mathcal{E} = 6.00\ \text{V}$ and no internal resistance supplies current to the circuit shown in Figure P28.11. When the double-throw switch S is open as shown in the figure, the current in the battery is 1.00 mA. When the switch is closed in position a , the current in the

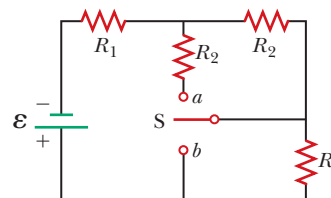


Figure P28.11

Problems 11 and 12.

battery is 1.20 mA. When the switch is closed in position b , the current in the battery is 2.00 mA. Find the resistances (a) R_1 , (b) R_2 , and (c) R_3 .

12. A battery with emf \mathcal{E} and no internal resistance supplies current to the circuit shown in Figure P28.11. When the double-throw switch S is open as shown in the figure, the current in the battery is I_0 . When the switch is closed in position a , the current in the battery is I_a . When the switch is closed in position b , the current in the battery is I_b . Find the resistances (a) R_1 , (b) R_2 , and (c) R_3 .

13. (a) Find the equivalent resistance between points a and b in Figure P28.13. (b) Calculate the current in each resistor if a potential difference of 34.0 V is applied between points a and b .

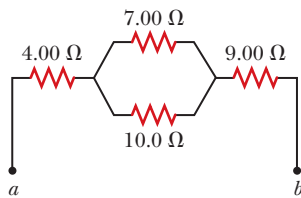


Figure P28.13

14. (a) When the switch S in the circuit of Figure P28.14 is closed, will the equivalent resistance between points a and b increase or decrease? State your reasoning. (b) Assume the equivalent resistance drops by 50.0% when the switch is closed. Determine the value of R .

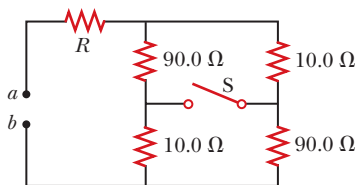


Figure P28.14

15. Two resistors connected in series have an equivalent resistance of 690 Ω . When they are connected in parallel, their equivalent resistance is 150 Ω . Find the resistance of each resistor.
16. Four resistors are connected to a battery as shown in Figure P28.16. (a) Determine the potential difference across each resistor in terms of \mathcal{E} . (b) Determine the current in each resistor in terms of I . (c) **What If?** If R_3 is increased, explain what happens to the current in each of the resistors. (d) In the limit that $R_3 \rightarrow \infty$, what are the new values of the current in each resistor in terms of I , the original current in the battery?

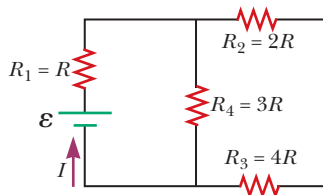


Figure P28.16

17. Consider the combination of resistors shown in Figure P28.17. (a) Find the equivalent resistance between points a and b . (b) If a voltage of 35.0 V is applied between points a and b , find the current in each resistor.

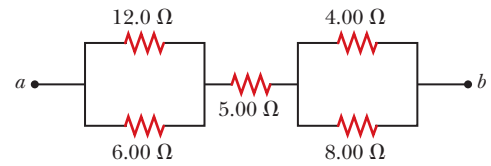


Figure P28.17

18. For the purpose of measuring the electric resistance of shoes through the body of the wearer standing on a metal ground plate, the American National Standards Institute (ANSI) specifies the circuit shown in Figure P28.18. The potential difference ΔV across the 1.00-M Ω resistor is measured with an ideal voltmeter. (a) Show that the resistance of the footwear is

$$R_{\text{shoes}} = \frac{50.0 \text{ V} - \Delta V}{\Delta V}$$

- (b) In a medical test, a current through the human body should not exceed 150 μA . Can the current delivered by the ANSI-specified circuit exceed 150 μA ? To decide, consider a person standing barefoot on the ground plate.

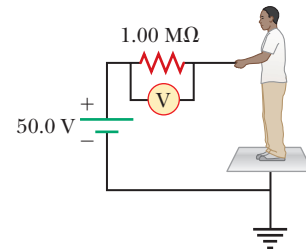


Figure P28.18

19. Calculate the power delivered to each resistor in the circuit shown in Figure P28.19.

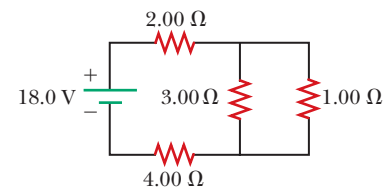


Figure P28.19

20. Why is the following situation impossible? A technician is testing a circuit that contains a resistance R . He realizes that a better design for the circuit would include a resistance $\frac{7}{3}R$ rather than R . He has three additional resistors, each with resistance R . By combining these additional resistors in a certain combination that is then placed in series with the original resistor, he achieves the desired resistance.
21. Consider the circuit shown in Figure P28.21 on page 860. (a) Find the voltage across the 3.00- Ω resistor. (b) Find the current in the 3.00- Ω resistor.

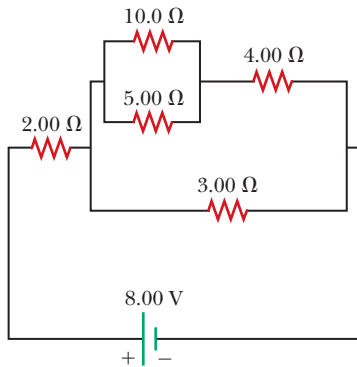


Figure P28.21

Section 28.3 Kirchhoff's Rules

- 22.** In Figure P28.22, show how to add just enough ammeters to measure every different current. Show how to add just enough voltmeters to measure the potential difference across each resistor and across each battery.

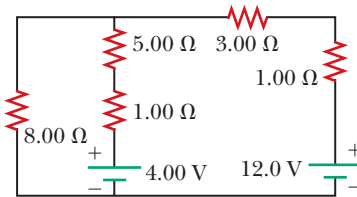


Figure P28.22 Problems 22 and 23.

- 23.** The circuit shown in Figure P28.22 is connected for 2.00 min. (a) Determine the current in each branch of the circuit. (b) Find the energy delivered by each battery. (c) Find the energy delivered to each resistor. (d) Identify the type of energy storage transformation that occurs in the operation of the circuit. (e) Find the total amount of energy transformed into internal energy in the resistors.

- 24.** For the circuit shown in Figure P28.24, calculate (a) the current in the 2.00-Ω resistor and (b) the potential difference between points *a* and *b*.

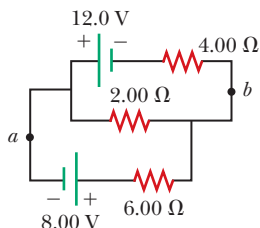


Figure P28.24

- 25.** What are the expected readings of (a) the ideal ammeter and (b) the ideal voltmeter in Figure P28.25?

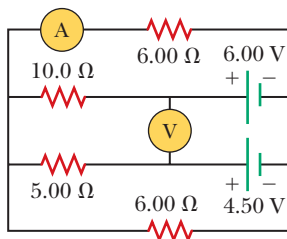


Figure P28.25

- 26.** The following equations describe an electric circuit:

$$-I_1 (220 \, \Omega) + 5.80 \, \text{V} - I_2 (370 \, \Omega) = 0$$

$$+I_2 (370 \, \Omega) + I_3 (150 \, \Omega) - 3.10 \, \text{V} = 0$$

$$I_1 + I_3 - I_2 = 0$$

- (a) Draw a diagram of the circuit. (b) Calculate the unknowns and identify the physical meaning of each unknown.

- 27.** Taking $R = 1.00 \, \text{k}\Omega$ and $\mathcal{E} = 250 \, \text{V}$ in Figure P28.27, determine the direction and magnitude of the current in the horizontal wire between *a* and *e*.

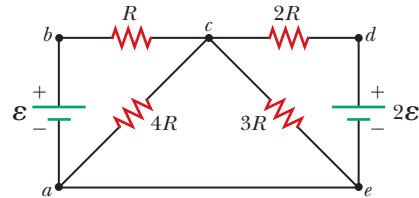


Figure P28.27

- 28.** Jumper cables are connected from a fresh battery in one car to charge a dead battery in another car. Figure P28.28 shows the circuit diagram for this situation. While the cables are connected, the ignition switch of the car with the dead battery is closed and the starter is activated to start the engine. Determine the current in (a) the starter and (b) the dead battery. (c) Is the dead battery being charged while the starter is operating?

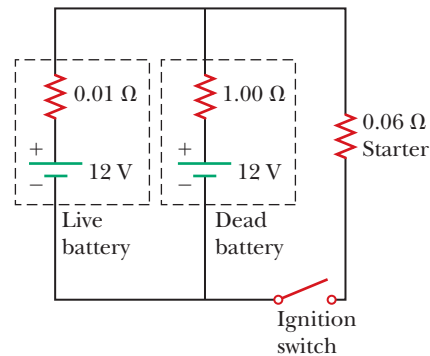


Figure P28.28

- 29.** The ammeter shown in Figure P28.29 reads 2.00 A. Find (a) I_1 , (b) I_2 , and (c) \mathcal{E} .

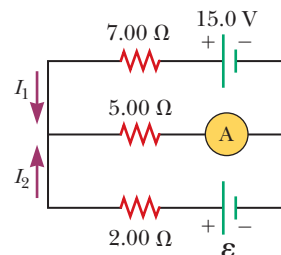


Figure P28.29

- 30.** In the circuit of Figure P28.30, determine (a) the current in each resistor and (b) the potential difference across the 200-Ω resistor.

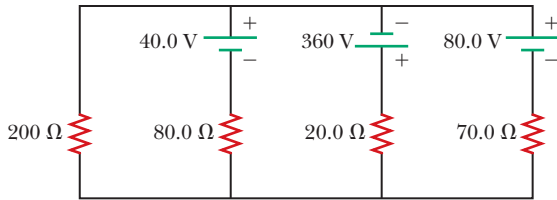


Figure P28.30

31. Using Kirchhoff's rules, (a) find the current in each resistor shown in Figure P28.31 and (b) find the potential difference between points c and f .

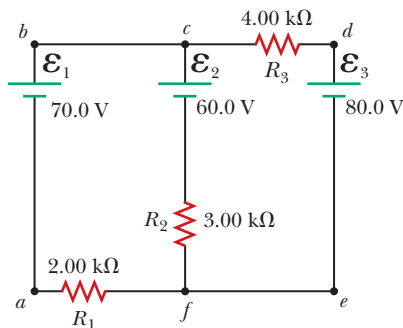


Figure P28.31

32. In the circuit of Figure P28.32, the current $I_1 = 3.00$ A and the values of \mathcal{E} for the ideal battery and R are unknown. What are the currents (a) I_2 and (b) I_3 ? (c) Can you find the values of \mathcal{E} and R ? If so, find their values. If not, explain.

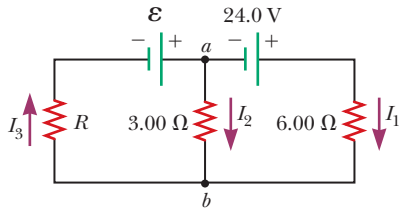


Figure P28.32

33. In Figure P28.33, find (a) the current in each resistor and (b) the power delivered to each resistor.

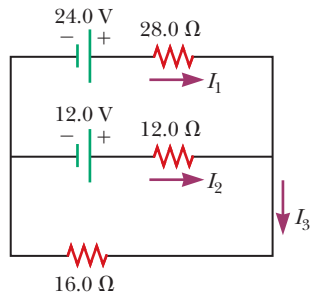


Figure P28.33

34. For the circuit shown in Figure P28.34, we wish to find the currents I_1 , I_2 , and I_3 . Use Kirchhoff's rules to obtain equations for (a) the upper loop, (b) the lower

loop, and (c) the junction on the left side. In each case, suppress units for clarity and simplify, combining the terms. (d) Solve the junction equation for I_3 . (e) Using the equation found in part (d), eliminate I_3 from the equation found in part (b). (f) Solve the equations found in parts (a) and (e) simultaneously for the two unknowns I_1 and I_2 . (g) Substitute the answers found in part (f) into the junction equation found in part (d), solving for I_3 . (h) What is the significance of the negative answer for I_2 ?

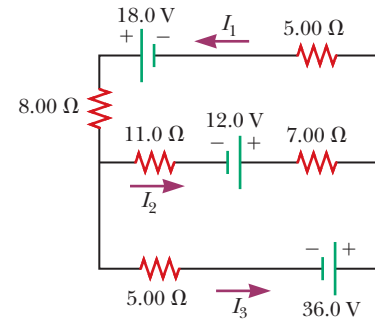


Figure P28.34

35. Find the potential difference across each resistor in Figure P28.35.

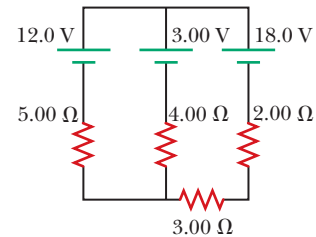


Figure P28.35

36. (a) Can the circuit shown in Figure P28.36 be reduced to a single resistor connected to a battery? Explain. Calculate the currents (b) I_1 , (c) I_2 , and (d) I_3 .

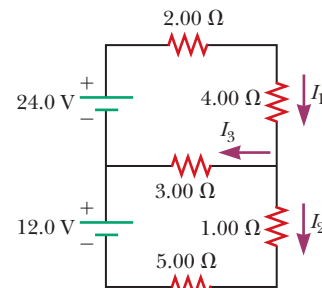


Figure P28.36

Section 28.4 RC Circuits

37. An uncharged capacitor and a resistor are connected in series to a source of emf. If $\mathcal{E} = 9.00$ V, $C = 20.0$ μ F, and $R = 100$ Ω , find (a) the time constant of the circuit, (b) the maximum charge on the capacitor, and (c) the charge on the capacitor at a time equal to one time constant after the battery is connected.

- 38.** Consider a series RC circuit as in Figure P28.38 for which $R = 1.00 \text{ M}\Omega$, $C = 5.00 \text{ }\mu\text{F}$, and $\mathcal{E} = 30.0 \text{ V}$. Find (a) the time constant of the circuit and (b) the maximum charge on the capacitor after the switch is thrown closed. (c) Find the current in the resistor 10.0 s after the switch is closed.

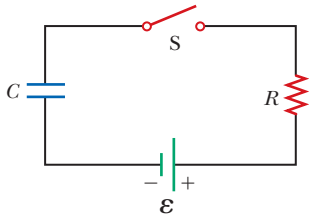


Figure P28.38

Problems 38, 67, and 68.

- 39.** A 2.00-nF capacitor with an initial charge of $5.10 \text{ }\mu\text{C}$ is discharged through a $1.30\text{-k}\Omega$ resistor. (a) Calculate the current in the resistor $9.00 \text{ }\mu\text{s}$ after the resistor is connected across the terminals of the capacitor. (b) What charge remains on the capacitor after $8.00 \text{ }\mu\text{s}$? (c) What is the maximum current in the resistor?
- 40.** A $10.0\text{-}\mu\text{F}$ capacitor is charged by a 10.0-V battery through a resistance R . The capacitor reaches a potential difference of 4.00 V in a time interval of 3.00 s after charging begins. Find R .

- 41.** In the circuit of Figure P28.41, the switch S has been open for a long time. It is then suddenly closed. Take $\mathcal{E} = 10.0 \text{ V}$, $R_1 = 50.0 \text{ k}\Omega$, $R_2 = 100 \text{ k}\Omega$, and $C = 10.0 \text{ }\mu\text{F}$. Determine the time constant (a) before the switch is closed and (b) after the switch is closed. (c) Let the switch be closed at $t = 0$. Determine the current in the switch as a function of time.

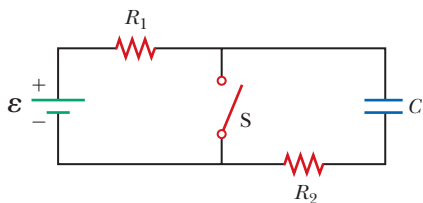


Figure P28.41 Problems 41 and 42.

- 42.** In the circuit of Figure P28.41, the switch S has been open for a long time. It is then suddenly closed. Determine the time constant (a) before the switch is closed and (b) after the switch is closed. (c) Let the switch be closed at $t = 0$. Determine the current in the switch as a function of time.
- 43.** The circuit in Figure P28.43 has been connected for a long time. (a) What is the potential difference across the capacitor? (b) If the battery is disconnected from the circuit, over what time interval does the capacitor discharge to one-tenth its initial voltage?

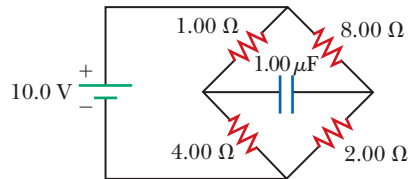


Figure P28.43

- 44.** Show that the integral $\int_0^\infty e^{-2t/RC} dt$ in Example 28.11 has the value $\frac{1}{2}RC$.
- 45.** A charged capacitor is connected to a resistor and switch as in Figure P28.45. The circuit has a time constant of 1.50 s . Soon after the switch is closed, the charge on the capacitor is 75.0% of its initial charge. (a) Find the time interval required for the capacitor to reach this charge. (b) If $R = 250 \text{ k}\Omega$, what is the value of C ?

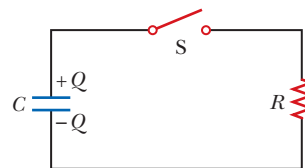


Figure P28.45

Section 28.5 Household Wiring and Electrical Safety

- 46.** An electric heater is rated at $1.50 \times 10^3 \text{ W}$, a toaster at 750 W , and an electric grill at $1.00 \times 10^3 \text{ W}$. The three appliances are connected to a common 120-V household circuit. (a) How much current does each draw? (b) If the circuit is protected with a 25.0-A circuit breaker, will the circuit breaker be tripped in this situation? Explain your answer.
- 47.** A heating element in a stove is designed to receive 3000 W when connected to 240 V . (a) Assuming the resistance is constant, calculate the current in the heating element if it is connected to 120 V . (b) Calculate the power it receives at that voltage.
- 48.** Turn on your desk lamp. Pick up the cord, with your thumb and index finger spanning the width of the cord. (a) Compute an order-of-magnitude estimate for the current in your hand. Assume the conductor inside the lamp cord next to your thumb is at potential $\sim 10^2 \text{ V}$ at a typical instant and the conductor next to your index finger is at ground potential (0 V). The resistance of your hand depends strongly on the thickness and the moisture content of the outer layers of your skin. Assume the resistance of your hand between fingertip and thumb tip is $\sim 10^4 \text{ }\Omega$. You may model the cord as having rubber insulation. State the other quantities you measure or estimate and their values. Explain your reasoning. (b) Suppose your body is isolated from any other charges or currents. In order-of-magnitude terms, estimate the potential difference between your thumb where it contacts the cord and your finger where it touches the cord.

Additional Problems

49. Assume you have a battery of emf \mathcal{E} and three identical lightbulbs, each having constant resistance R . What is the total power delivered by the battery if the lightbulbs are connected (a) in series and (b) in parallel? (c) For which connection will the lightbulbs shine the brightest?
50. Find the equivalent resistance between points a and b in Figure P28.50.

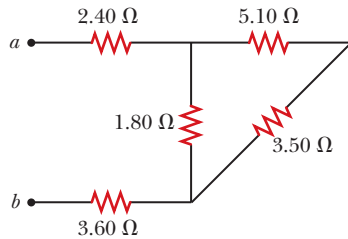


Figure P28.50

51. Four 1.50-V AA batteries in series are used to power a small radio. If the batteries can move a charge of 240 C, how long will they last if the radio has a resistance of 200 Ω ?
52. Four resistors are connected in parallel across a 9.20-V battery. They carry currents of 150 mA, 45.0 mA, 14.0 mA, and 4.00 mA. If the resistor with the largest resistance is replaced with one having twice the resistance, (a) what is the ratio of the new current in the battery to the original current? (b) **What If?** If instead the resistor with the smallest resistance is replaced with one having twice the resistance, what is the ratio of the new total current to the original current? (c) On a February night, energy leaves a house by several energy leaks, including 1.50×10^3 W by conduction through the ceiling, 450 W by infiltration (airflow) around the windows, 140 W by conduction through the basement wall above the foundation sill, and 40.0 W by conduction through the plywood door to the attic. To produce the biggest saving in heating bills, which one of these energy transfers should be reduced first? Explain how you decide. Clifford Swartz suggested the idea for this problem.

53. The circuit in Figure P28.53 has been connected for several seconds. Find the current (a) in the 4.00-V bat-

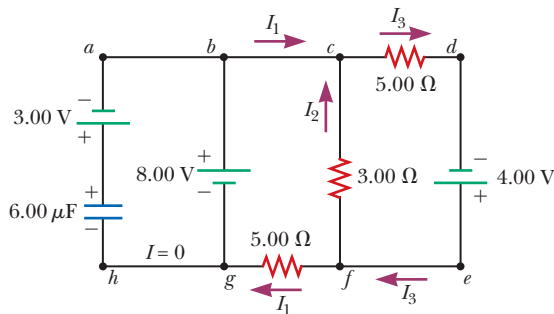


Figure P28.53

tery, (b) in the 3.00- Ω resistor, (c) in the 8.00-V battery, and (d) in the 3.00-V battery. (e) Find the charge on the capacitor.

54. The circuit in Figure P28.54a consists of three resistors and one battery with no internal resistance. (a) Find the current in the 5.00- Ω resistor. (b) Find the power delivered to the 5.00- Ω resistor. (c) In each of the circuits in Figures P28.54b, P28.54c, and P28.54d, an additional 15.0-V battery has been inserted into the circuit. Which diagram or diagrams represent a circuit that requires the use of Kirchhoff's rules to find the currents? Explain why. (d) In which of these three new circuits is the smallest amount of power delivered to the 10.0- Ω resistor? (You need not calculate the power in each circuit if you explain your answer.)

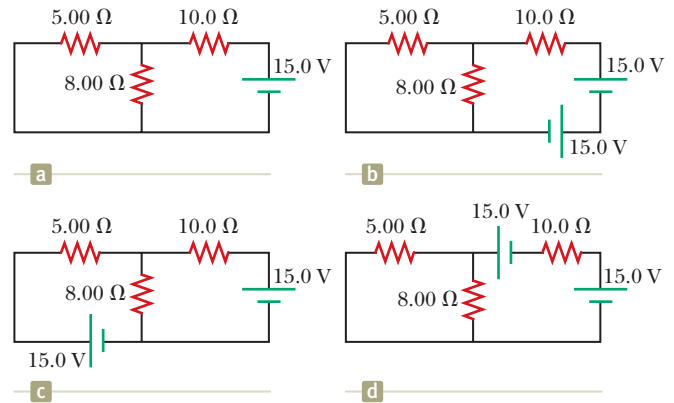


Figure P28.54

55. For the circuit shown in Figure P28.55, the ideal voltmeter reads 6.00 V and the ideal ammeter reads 3.00 mA. Find (a) the value of R , (b) the emf of the battery, and (c) the voltage across the 3.00-k Ω resistor.

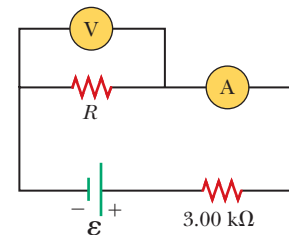


Figure P28.55

56. The resistance between terminals a and b in Figure P28.56 is 75.0 Ω . If the resistors labeled R have the same value, determine R .

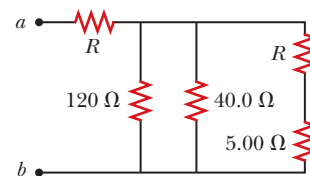


Figure P28.56

57. (a) Calculate the potential difference between points a and b in Figure P28.57 and (b) identify which point is at the higher potential.

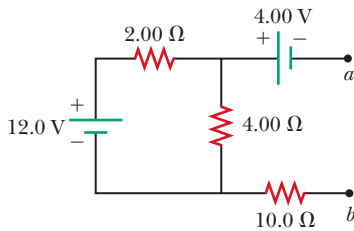


Figure P28.57

58. Why is the following situation impossible? A battery has an emf of $\mathcal{E} = 9.20$ V and an internal resistance of $r = 1.20$ Ω . A resistance R is connected across the battery and extracts from it a power of $P = 21.2$ W.
59. A rechargeable battery has an emf of 13.2 V and an internal resistance of 0.850 Ω . It is charged by a 14.7-V power supply for a time interval of 1.80 h. After charging, the battery returns to its original state as it delivers a constant current to a load resistor over 7.30 h. Find the efficiency of the battery as an energy storage device. (The efficiency here is defined as the energy delivered to the load during discharge divided by the energy delivered by the 14.7-V power supply during the charging process.)

60. Find (a) the equivalent resistance of the circuit in Figure P28.60, (b) the potential difference across each resistor, (c) each current indicated in Figure P28.60, and (d) the power delivered to each resistor.

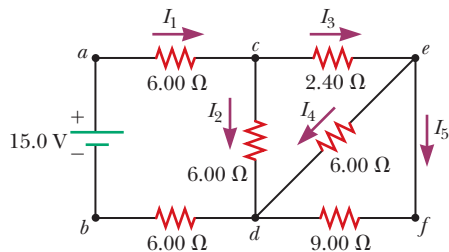


Figure P28.60

61. When two unknown resistors are connected in series with a battery, the battery delivers 225 W and carries a total current of 5.00 A. For the same total current, 50.0 W is delivered when the resistors are connected in parallel. Determine the value of each resistor.
62. When two unknown resistors are connected in series with a battery, the battery delivers total power P_s and carries a total current of I . For the same total current, a total power P_p is delivered when the resistors are connected in parallel. Determine the value of each resistor.
63. The pair of capacitors in Figure P28.63 are fully charged by a 12.0-V battery. The battery is disconnected, and the switch is then closed. After 1.00 ms has elapsed, (a) how much charge remains on the 3.00- μ F

capacitor? (b) How much charge remains on the 2.00- μ F capacitor? (c) What is the current in the resistor at this time?

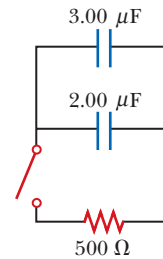


Figure P28.63

64. A power supply has an open-circuit voltage of 40.0 V and an internal resistance of 2.00 Ω . It is used to charge two storage batteries connected in series, each having an emf of 6.00 V and internal resistance of 0.300 Ω . If the charging current is to be 4.00 A, (a) what additional resistance should be added in series? At what rate does the internal energy increase in (b) the supply, (c) in the batteries, and (d) in the added series resistance? (e) At what rate does the chemical energy increase in the batteries?
65. The circuit in Figure P28.65 contains two resistors, $R_1 = 2.00$ k Ω and $R_2 = 3.00$ k Ω , and two capacitors, $C_1 = 2.00$ μ F and $C_2 = 3.00$ μ F, connected to a battery with emf $\mathcal{E} = 120$ V. If there are no charges on the capacitors before switch S is closed, determine the charges on capacitors (a) C_1 and (b) C_2 as functions of time, after the switch is closed.

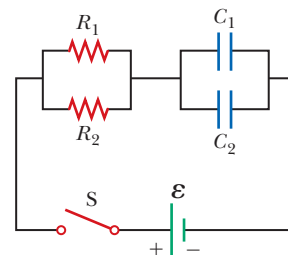


Figure P28.65

66. Two resistors R_1 and R_2 are in parallel with each other. Together they carry total current I . (a) Determine the current in each resistor. (b) Prove that this division of the total current I between the two resistors results in less power delivered to the combination than any other division. It is a general principle that *current in a direct current circuit distributes itself so that the total power delivered to the circuit is a minimum*.
67. The values of the components in a simple series RC circuit containing a switch (Fig. P28.38) are $C = 1.00$ μ F, $R = 2.00 \times 10^6$ Ω , and $\mathcal{E} = 10.0$ V. At the instant 10.0 s after the switch is closed, calculate (a) the charge on the capacitor, (b) the current in the resistor, (c) the rate at which energy is being stored in the capacitor, and (d) the rate at which energy is being delivered by the battery.

68. A battery is used to charge a capacitor through a resistor as shown in Figure P28.38. Show that half the energy supplied by the battery appears as internal energy in the resistor and half is stored in the capacitor.
69. A young man owns a canister vacuum cleaner marked “535 W [at] 120 V” and a Volkswagen Beetle, which he wishes to clean. He parks the car in his apartment parking lot and uses an inexpensive extension cord 15.0 m long to plug in the vacuum cleaner. You may assume the cleaner has constant resistance. (a) If the resistance of each of the two conductors in the extension cord is $0.900\ \Omega$, what is the actual power delivered to the cleaner? (b) If instead the power is to be at least 525 W, what must be the diameter of each of two identical copper conductors in the cord he buys? (c) Repeat part (b) assuming the power is to be at least 532 W.
70. (a) Determine the equilibrium charge on the capacitor in the circuit of Figure P28.70 as a function of R . (b) Evaluate the charge when $R = 10.0\ \Omega$. (c) Can the charge on the capacitor be zero? If so, for what value of R ? (d) What is the maximum possible magnitude of the charge on the capacitor? For what value of R is it achieved? (e) Is it experimentally meaningful to take $R = \infty$? Explain your answer. If so, what charge magnitude does it imply?

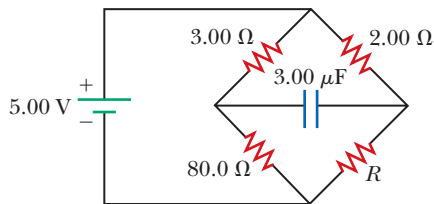


Figure P28.70

71. Switch S shown in Figure P28.71 has been closed for a long time, and the electric circuit carries a constant current. Take $C_1 = 3.00\ \mu\text{F}$, $C_2 = 6.00\ \mu\text{F}$, $R_1 = 4.00\ \text{k}\Omega$, and $R_2 = 7.00\ \text{k}\Omega$. The power delivered to R_2 is 2.40 W. (a) Find the charge on C_1 . (b) Now the switch is opened. After many milliseconds, by how much has the charge on C_2 changed?

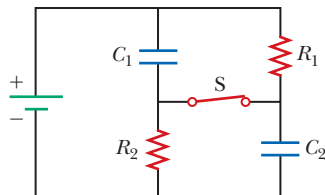


Figure P28.71

72. Three identical 60.0-W, 120-V lightbulbs are connected across a 120-V power source as shown in Figure P28.72. Assuming the resistance of each lightbulb is constant (even though in reality the resistance might increase markedly with current), find (a) the total power supplied by the power source and (b) the potential difference across each lightbulb.

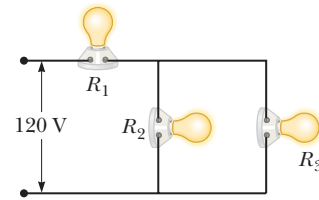


Figure P28.72

73. A regular tetrahedron is a pyramid with a triangular base and triangular sides as shown in Figure P28.73. Imagine the six straight lines in Figure P28.73 are each $10.0\text{-}\Omega$ resistors, with junctions at the four vertices. A 12.0-V battery is connected to any two of the vertices. Find (a) the equivalent resistance of the tetrahedron between these vertices and (b) the current in the battery.

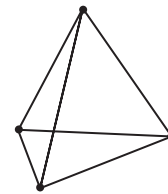


Figure P28.73

74. An ideal voltmeter connected across a certain fresh 9-V battery reads 9.30 V, and an ideal ammeter briefly connected across the same battery reads 3.70 A. We say the battery has an open-circuit voltage of 9.30 V and a short-circuit current of 3.70 A. Model the battery as a source of emf \mathcal{E} in series with an internal resistance r as in Figure 28.1a. Determine both (a) \mathcal{E} and (b) r . An experimenter connects two of these identical batteries together as shown in Figure P28.74. Find (c) the open-circuit voltage and (d) the short-circuit current of the pair of connected batteries. (e) The experimenter connects a $12.0\text{-}\Omega$ resistor between the exposed terminals of the connected batteries. Find the current in the resistor. (f) Find the power delivered to the resistor. (g) The experimenter connects a second identical resistor in parallel with the first. Find the power delivered to each resistor. (h) Because the same pair of batteries is connected across both resistors as was connected across the single resistor, why is the power in part (g) not the same as that in part (f)?

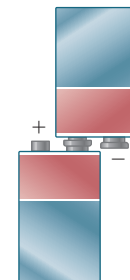


Figure P28.74

75. In Figure P28.75 on page 866, suppose the switch has been closed for a time interval sufficiently long for the capacitor to become fully charged. Find (a) the

steady-state current in each resistor and (b) the charge Q_{\max} on the capacitor. (c) The switch is now opened at $t = 0$. Write an equation for the current in R_2 as a function of time and (d) find the time interval required for the charge on the capacitor to fall to one-fifth its initial value.

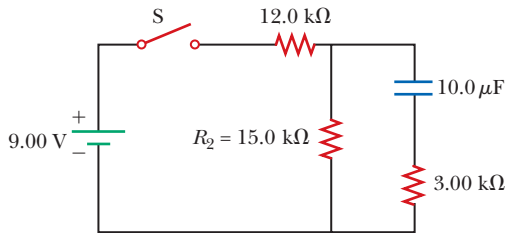


Figure P28.75

76. Figure P28.76 shows a circuit model for the transmission of an electrical signal such as cable TV to a large number of subscribers. Each subscriber connects a load resistance R_L between the transmission line and the ground. The ground is assumed to be at zero potential and able to carry any current between any ground connections with negligible resistance. The resistance of the transmission line between the connection points of different subscribers is modeled as the constant resistance R_T . Show that the equivalent resistance across the signal source is

$$R_{\text{eq}} = \frac{1}{2} [(4R_T R_L + R_T^2)^{1/2} + R_T]$$

Suggestion: Because the number of subscribers is large, the equivalent resistance would not change noticeably if the first subscriber canceled the service. Consequently, the equivalent resistance of the section of the circuit to the right of the first load resistor is nearly equal to R_{eq} .

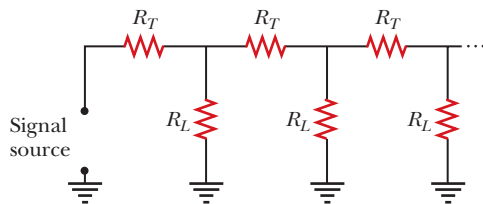


Figure P28.76

77. The student engineer of a campus radio station wishes to verify the effectiveness of the lightning rod on the antenna mast (Fig. P28.77). The unknown resistance R_x is between points C and E . Point E is a true ground, but it is inaccessible for direct measurement because this stratum is several meters below the Earth's surface. Two identical rods are driven into the ground at A and B , introducing an unknown resistance R_y . The procedure is as follows. Measure resistance R_1 between points A and B , then connect A and B with a heavy conducting wire and measure resistance R_2 between points A and C . (a) Derive an equation for R_x in terms of the

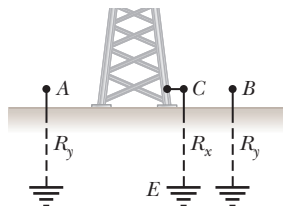


Figure P28.77

observable resistances, R_1 and R_2 . (b) A satisfactory ground resistance would be $R_x < 2.00 \Omega$. Is the grounding of the station adequate if measurements give $R_1 = 13.0 \Omega$ and $R_2 = 6.00 \Omega$? Explain.

78. The circuit shown in Figure P28.78 is set up in the laboratory to measure an unknown capacitance C in series with a resistance $R = 10.0 \text{ M}\Omega$ powered by a battery whose emf is 6.19 V. The data given in the table are the measured voltages across the capacitor as a function of time, where $t = 0$ represents the instant at which the switch is thrown to position b . (a) Construct a graph of $\ln(\mathcal{E}/\Delta v)$ versus t and perform a linear least-squares fit to the data. (b) From the slope of your graph, obtain a value for the time constant of the circuit and a value for the capacitance.

Δv (V)	t (s)	$\ln(\mathcal{E}/\Delta v)$
6.19	0	
5.55	4.87	
4.93	11.1	
4.34	19.4	
3.72	30.8	
3.09	46.6	
2.47	67.3	
1.83	102.2	

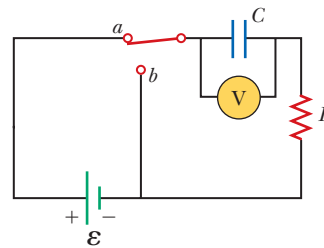


Figure P28.78

79. An electric teakettle has a multiposition switch and two heating coils. When only one coil is switched on, the well-insulated kettle brings a full pot of water to a boil over the time interval Δt . When only the other coil is switched on, it takes a time interval of $2 \Delta t$ to boil the same amount of water. Find the time interval required to boil the same amount of water if both coils are switched on (a) in a parallel connection and (b) in a series connection.

80. A voltage ΔV is applied to a series configuration of n resistors, each of resistance R . The circuit components are reconnected in a parallel configuration, and voltage ΔV is again applied. Show that the power delivered to the series configuration is $1/n^2$ times the power delivered to the parallel configuration.

81. In places such as hospital operating rooms or factories for electronic circuit boards, electric sparks must be avoided. A person standing on a grounded floor and touching nothing else can typically have a body capacitance of 150 pF , in parallel with a foot capacitance of 80.0 pF produced by the dielectric soles of his or her shoes. The person acquires static electric charge from interactions with his or her surroundings. The static charge flows to ground through the equivalent resistance of the two

shoe soles in parallel with each other. A pair of rubber-soled street shoes can present an equivalent resistance of $5.00 \times 10^3 \text{ M}\Omega$. A pair of shoes with special static-dissipative soles can have an equivalent resistance of $1.00 \text{ M}\Omega$. Consider the person's body and shoes as forming an RC circuit with the ground. (a) How long does it take the rubber-soled shoes to reduce a person's potential from $3.00 \times 10^3 \text{ V}$ to 100 V ? (b) How long does it take the static-dissipative shoes to do the same thing?

Challenge Problems

82. The switch in Figure P28.82a closes when $\Delta V_c > \frac{2}{3} \Delta V$ and opens when $\Delta V_c < \frac{1}{3} \Delta V$. The ideal voltmeter reads

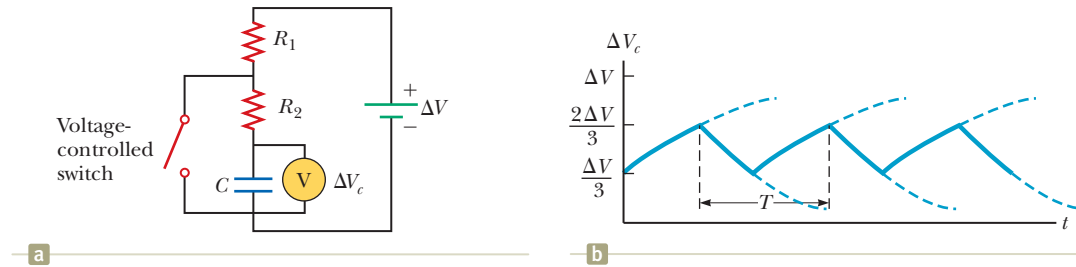


Figure P28.82

a potential difference as plotted in Figure P28.82b. What is the period T of the waveform in terms of R_1 , R_2 , and C ?

83. The resistor R in Figure P28.83 receives 20.0 W of power. Determine the value of R .

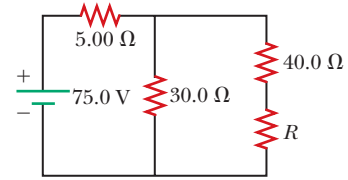



Figure P28.83

Magnetic Fields

- 29.1 Analysis Model: Particle in a Field (Magnetic)
- 29.2 Motion of a Charged Particle in a Uniform Magnetic Field
- 29.3 Applications Involving Charged Particles Moving in a Magnetic Field
- 29.4 Magnetic Force Acting on a Current-Carrying Conductor
- 29.5 Torque on a Current Loop in a Uniform Magnetic Field
- 29.6 The Hall Effect



An engineer performs a test on the electronics associated with one of the superconducting magnets in the Large Hadron Collider at the European Laboratory for Particle Physics, operated by the European Organization for Nuclear Research (CERN). The magnets are used to control the motion of charged particles in the accelerator. We will study the effects of magnetic fields on moving charged particles in this chapter. (CERN)

Many historians of science believe that the compass, which uses a magnetic needle, was used in China as early as the 13th century BC, its invention being of Arabic or Indian origin. The early Greeks knew about magnetism as early as 800 BC. They discovered that the stone magnetite (Fe_3O_4) attracts pieces of iron. Legend ascribes the name *magnetite* to the shepherd Magnes, the nails of whose shoes and the tip of whose staff stuck fast to chunks of magnetite while he pastured his flocks.

In 1269, Pierre de Maricourt of France found that the directions of a needle near a spherical natural magnet formed lines that encircled the sphere and passed through two points diametrically opposite each other, which he called the *poles* of the magnet. Subsequent experiments showed that every magnet, regardless of its shape, has two poles, called *north* (N) and *south* (S) poles, that exert forces on other magnetic poles similar to the way electric charges exert forces on one another. That is, like poles (N–N or S–S) repel each other, and opposite poles (N–S) attract each other.

The poles received their names because of the way a magnet, such as that in a compass, behaves in the presence of the Earth's magnetic field. If a bar magnet is suspended from its midpoint and can swing freely in a horizontal plane, it will rotate until its north pole points to the Earth's geographic North Pole and its south pole points to the Earth's geographic South Pole.¹

In 1600, William Gilbert (1540–1603) extended de Maricourt's experiments to a variety of materials. He knew that a compass needle orients in preferred directions, so he suggested that the Earth itself is a large, permanent magnet. In 1750, experimenters used a torsion balance to show that magnetic poles exert attractive or repulsive forces on each other and that these forces vary as the inverse square of the distance between interacting poles. Although the force between two magnetic poles is otherwise similar to the force between two electric charges, electric charges can be isolated (witness the electron and proton), whereas a single magnetic pole has never been isolated. That is, magnetic poles are always found in pairs. All attempts thus far to detect an isolated magnetic pole have been unsuccessful. No matter how many times a permanent magnet is cut in two, each piece always has a north and a south pole.²

The relationship between magnetism and electricity was discovered in 1819 when, during a lecture demonstration, Hans Christian Oersted found that an electric current in a wire deflected a nearby compass needle.³ In the 1820s, further connections between electricity and magnetism were demonstrated independently by Faraday and Joseph Henry (1797–1878). They showed that an electric current can be produced in a circuit either by moving a magnet near the circuit or by changing the current in a nearby circuit. These observations demonstrate that a changing magnetic field creates an electric field. Years later, theoretical work by Maxwell showed that the reverse is also true: a changing electric field creates a magnetic field.

This chapter examines the forces that act on moving charges and on current-carrying wires in the presence of a magnetic field. The source of the magnetic field is described in Chapter 30.

29.1 Analysis Model: Particle in a Field (Magnetic)

In our study of electricity, we described the interactions between charged objects in terms of electric fields. Recall that an electric field surrounds any electric charge. In addition to containing an electric field, the region of space surrounding any *moving* electric charge also contains a **magnetic field**. A magnetic field also surrounds a magnetic substance making up a permanent magnet.

Historically, the symbol $\vec{\mathbf{B}}$ has been used to represent a magnetic field, and we use this notation in this book. The direction of the magnetic field $\vec{\mathbf{B}}$ at any location is the direction in which a compass needle points at that location. As with the electric field, we can represent the magnetic field by means of drawings with *magnetic field lines*.

Figure 29.1 shows how the magnetic field lines of a bar magnet can be traced with the aid of a compass. Notice that the magnetic field lines outside the magnet



Hans Christian Oersted
Danish Physicist and Chemist
(1777–1851)

Oersted is best known for observing that a compass needle deflects when placed near a wire carrying a current. This important discovery was the first evidence of the connection between electric and magnetic phenomena. Oersted was also the first to prepare pure aluminum.

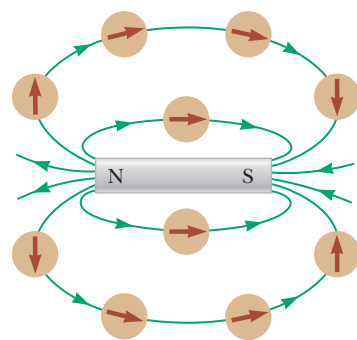


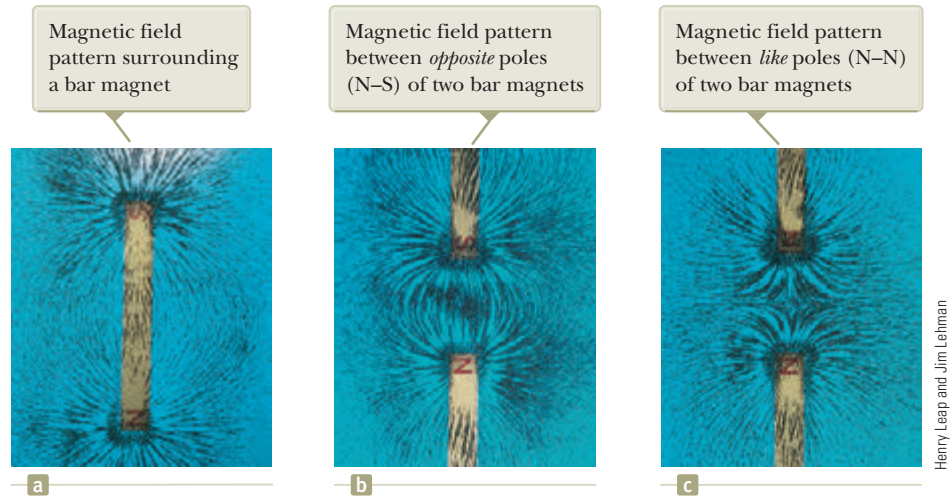
Figure 29.1 Compass needles can be used to trace the magnetic field lines in the region outside a bar magnet.

¹The Earth's geographic North Pole is magnetically a south pole, whereas the Earth's geographic South Pole is magnetically a north pole. Because *opposite* magnetic poles attract each other, the pole on a magnet that is attracted to the Earth's geographic North Pole is the magnet's *north* pole and the pole attracted to the Earth's geographic South Pole is the magnet's *south* pole.

²There is some theoretical basis for speculating that magnetic *monopoles*—isolated north or south poles—may exist in nature, and attempts to detect them are an active experimental field of investigation.

³The same discovery was reported in 1802 by an Italian jurist, Gian Domenico Romagnosi, but was overlooked, probably because it was published in an obscure journal.

Figure 29.2 Magnetic field patterns can be displayed with iron filings sprinkled on paper near magnets.



point away from the north pole and toward the south pole. One can display magnetic field patterns of a bar magnet using small iron filings as shown in Figure 29.2.

When we speak of a compass magnet having a north pole and a south pole, it is more proper to say that it has a “north-seeking” pole and a “south-seeking” pole. This wording means that the north-seeking pole points to the north geographic pole of the Earth, whereas the south-seeking pole points to the south geographic pole. Because the north pole of a magnet is attracted toward the north geographic pole of the Earth, the Earth’s south magnetic pole is located near the north geographic pole and the Earth’s north magnetic pole is located near the south geographic pole. In fact, the configuration of the Earth’s magnetic field, pictured in Figure 29.3, is very much like the one that would be achieved by burying a gigantic bar magnet deep in the Earth’s interior. If a compass needle is supported by bearings that allow it to rotate in the vertical plane as well as in the horizontal plane, the needle is horizontal with respect to the Earth’s surface only near the equator. As the compass is moved northward, the needle rotates so that it points more and more toward the Earth’s surface. Finally, at a point near Hudson Bay in Canada, the north pole of the needle points directly downward. This site, first found in 1832, is considered to be the location of the south magnetic pole of the Earth. It is approximately 1 300 mi from the Earth’s geographic

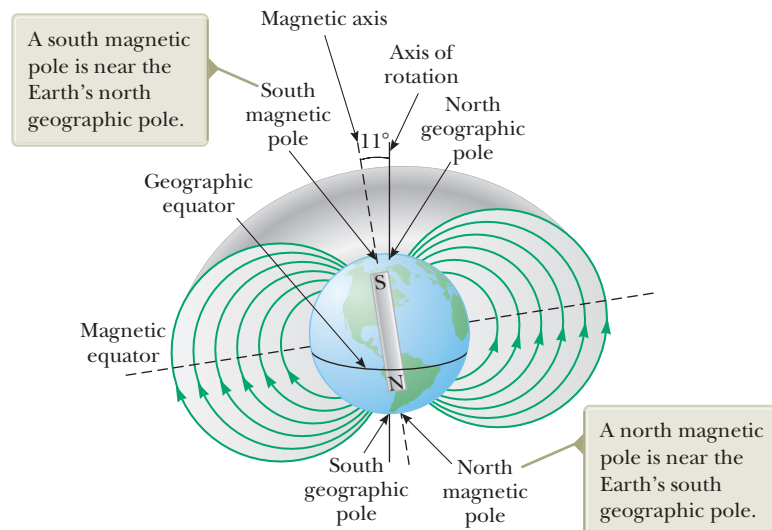


Figure 29.3 The Earth’s magnetic field lines.

North Pole, and its exact position varies slowly with time. Similarly, the north magnetic pole of the Earth is about 1 200 mi away from the Earth's geographic South Pole.

Although the Earth's magnetic field pattern is similar to the one that would be set up by a bar magnet deep within the Earth, it is easy to understand why the source of this magnetic field cannot be large masses of permanently magnetized material. The Earth does have large deposits of iron ore deep beneath its surface, but the high temperatures in the Earth's core prevent the iron from retaining any permanent magnetization. Scientists consider it more likely that the source of the Earth's magnetic field is convection currents in the Earth's core. Charged ions or electrons circulating in the liquid interior could produce a magnetic field just like a current loop does, as we shall see in Chapter 30. There is also strong evidence that the magnitude of a planet's magnetic field is related to the planet's rate of rotation. For example, Jupiter rotates faster than the Earth, and space probes indicate that Jupiter's magnetic field is stronger than the Earth's. Venus, on the other hand, rotates more slowly than the Earth, and its magnetic field is found to be weaker. Investigation into the cause of the Earth's magnetism is ongoing.

The direction of the Earth's magnetic field has reversed several times during the last million years. Evidence for this reversal is provided by basalt, a type of rock that contains iron. Basalt forms from material spewed forth by volcanic activity on the ocean floor. As the lava cools, it solidifies and retains a picture of the Earth's magnetic field direction. The rocks are dated by other means to provide a time line for these periodic reversals of the magnetic field.

We can quantify the magnetic field $\vec{\mathbf{B}}$ by using our model of a particle in a field, like the model discussed for gravity in Chapter 13 and for electricity in Chapter 23. The existence of a magnetic field at some point in space can be determined by measuring the **magnetic force** $\vec{\mathbf{F}}_B$ exerted on an appropriate test particle placed at that point. This process is the same one we followed in defining the electric field in Chapter 23. If we perform such an experiment by placing a particle with charge q in the magnetic field, we find the following results that are similar to those for experiments on electric forces:

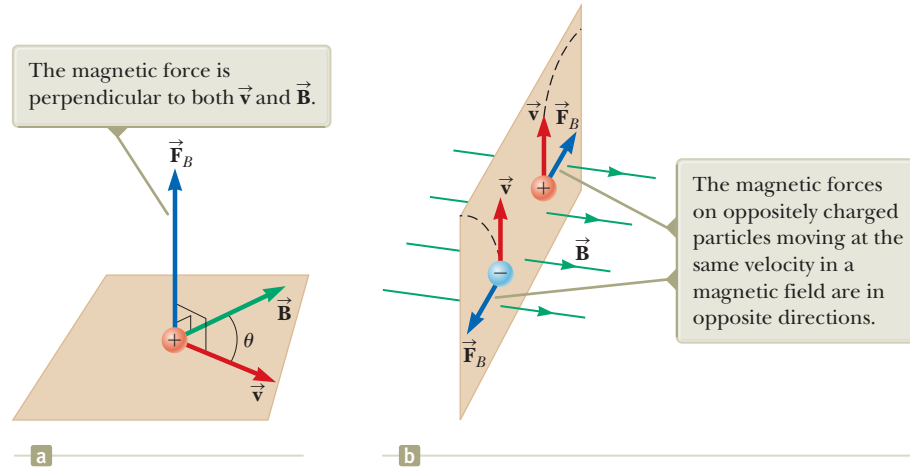
- The magnetic force is proportional to the charge q of the particle.
- The magnetic force on a negative charge is directed opposite to the force on a positive charge moving in the same direction.
- The magnetic force is proportional to the magnitude of the magnetic field vector $\vec{\mathbf{B}}$.

We also find the following results, which are *totally different* from those for experiments on electric forces:

- The magnetic force is proportional to the speed v of the particle.
- If the velocity vector makes an angle θ with the magnetic field, the magnitude of the magnetic force is proportional to $\sin \theta$.
- When a charged particle moves *parallel* to the magnetic field vector, the magnetic force on the charge is zero.
- When a charged particle moves in a direction *not* parallel to the magnetic field vector, the magnetic force acts in a direction perpendicular to both $\vec{\mathbf{v}}$ and $\vec{\mathbf{B}}$; that is, the magnetic force is perpendicular to the plane formed by $\vec{\mathbf{v}}$ and $\vec{\mathbf{B}}$.

These results show that the magnetic force on a particle is more complicated than the electric force. The magnetic force is distinctive because it depends on the velocity of the particle and because its direction is perpendicular to both $\vec{\mathbf{v}}$ and $\vec{\mathbf{B}}$. Figure 29.4 (page 872) shows the details of the direction of the magnetic force on a charged

Figure 29.4 (a) The direction of the magnetic force \vec{F}_B acting on a charged particle moving with a velocity \vec{v} in the presence of a magnetic field \vec{B} . (b) Magnetic forces on positive and negative charges. The dashed lines show the paths of the particles, which are investigated in Section 29.2.



particle. Despite this complicated behavior, these observations can be summarized in a compact way by writing the magnetic force in the form

$$\vec{F}_B = q\vec{v} \times \vec{B} \quad (29.1)$$

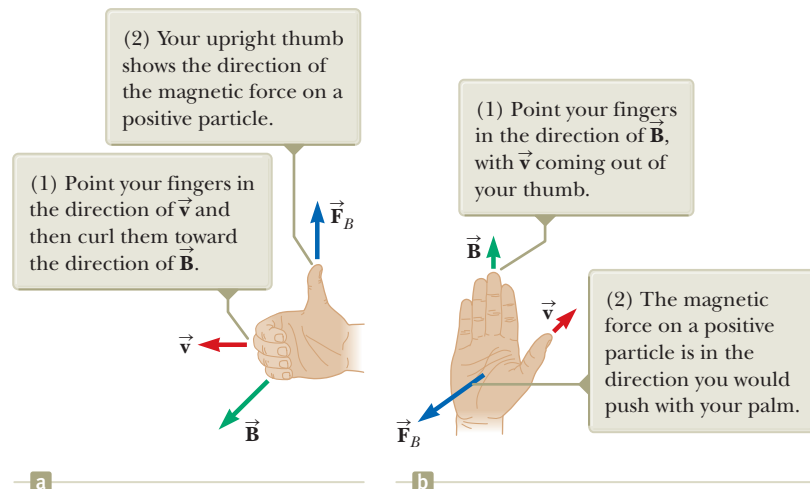
Vector expression for the magnetic force on a charged particle moving in a magnetic field

which by definition of the cross product (see Section 11.1) is perpendicular to both \vec{v} and \vec{B} . We can regard this equation as an operational definition of the magnetic field at some point in space. That is, the magnetic field is defined in terms of the force acting on a moving charged particle. Equation 29.1 is the mathematical representation of the magnetic version of the **particle in a field** analysis model.

Figure 29.5 reviews two right-hand rules for determining the direction of the cross product $\vec{v} \times \vec{B}$ and determining the direction of \vec{F}_B . The rule in Figure 29.5a depends on our right-hand rule for the cross product in Figure 11.2. Point the four fingers of your right hand along the direction of \vec{v} with the palm facing \vec{B} and curl them toward \vec{B} . Your extended thumb, which is at a right angle to your fingers, points in the direction of $\vec{v} \times \vec{B}$. Because $\vec{F}_B = q\vec{v} \times \vec{B}$, \vec{F}_B is in the direction of your thumb if q is positive and is opposite the direction of your thumb if q is negative. (If you need more help understanding the cross product, you should review Section 11.1, including Fig. 11.2.)

An alternative rule is shown in Figure 29.5b. Here the thumb points in the direction of \vec{v} and the extended fingers in the direction of \vec{B} . Now, the force \vec{F}_B on a positive charge extends outward from the palm. The advantage of this rule is that the force on the charge is in the direction you would push on something with your

Figure 29.5 Two right-hand rules for determining the direction of the magnetic force $\vec{F}_B = q\vec{v} \times \vec{B}$ acting on a particle with charge q moving with a velocity \vec{v} in a magnetic field \vec{B} . (a) In this rule, the magnetic force is in the direction in which your thumb points. (b) In this rule, the magnetic force is in the direction of your palm, as if you are pushing the particle with your hand.



hand: outward from your palm. The force on a negative charge is in the opposite direction. You can use either of these two right-hand rules.

The magnitude of the magnetic force on a charged particle is

$$F_B = |q|vB \sin \theta \quad (29.2)$$

where θ is the smaller angle between \vec{v} and \vec{B} . From this expression, we see that F_B is zero when \vec{v} is parallel or antiparallel to \vec{B} ($\theta = 0$ or 180°) and maximum when \vec{v} is perpendicular to \vec{B} ($\theta = 90^\circ$).

Let's compare the important differences between the electric and magnetic versions of the particle in a field model:

- The electric force vector is along the direction of the electric field, whereas the magnetic force vector is perpendicular to the magnetic field.
- The electric force acts on a charged particle regardless of whether the particle is moving, whereas the magnetic force acts on a charged particle only when the particle is in motion.
- The electric force does work in displacing a charged particle, whereas the magnetic force associated with a steady magnetic field does no work when a particle is displaced because the force is perpendicular to the displacement of its point of application.

From the last statement and on the basis of the work–kinetic energy theorem, we conclude that the kinetic energy of a charged particle moving through a magnetic field cannot be altered by the magnetic field alone. The field can alter the direction of the velocity vector, but it cannot change the speed or kinetic energy of the particle.

From Equation 29.2, we see that the SI unit of magnetic field is the newton per coulomb-meter per second, which is called the **tesla** (T):

$$1 \text{ T} = 1 \frac{\text{N}}{\text{C} \cdot \text{m/s}}$$

Because a coulomb per second is defined to be an ampere,

$$1 \text{ T} = 1 \frac{\text{N}}{\text{A} \cdot \text{m}}$$

A non-SI magnetic-field unit in common use, called the *gauss* (G), is related to the tesla through the conversion $1 \text{ T} = 10^4 \text{ G}$. Table 29.1 shows some typical values of magnetic fields.

- Quick Quiz 29.1** An electron moves in the plane of this paper toward the top of the page. A magnetic field is also in the plane of the page and directed toward the right. What is the direction of the magnetic force on the electron? (a) toward the top of the page (b) toward the bottom of the page (c) toward the left edge of the page (d) toward the right edge of the page (e) upward out of the page (f) downward into the page

Table 29.1 Some Approximate Magnetic Field Magnitudes

Source of Field	Field Magnitude (T)
Strong superconducting laboratory magnet	30
Strong conventional laboratory magnet	2
Medical MRI unit	1.5
Bar magnet	10^{-2}
Surface of the Sun	10^{-2}
Surface of the Earth	0.5×10^{-4}
Inside human brain (due to nerve impulses)	10^{-13}

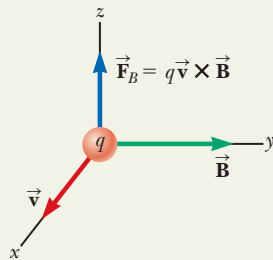
◀ Magnitude of the magnetic force on a charged particle moving in a magnetic field

◀ The tesla

Analysis Model Particle in a Field (Magnetic)

Imagine some source (which we will investigate later) establishes a **magnetic field** \vec{B} throughout space. Now imagine a particle with charge q is placed in that field. The particle interacts with the magnetic field so that the particle experiences a magnetic force given by

$$\vec{F}_B = q\vec{v} \times \vec{B} \quad (29.1)$$



Examples:

- an ion moves in a circular path in the magnetic field of a mass spectrometer (Section 29.3)
- a coil in a motor rotates in response to the magnetic field in the motor (Chapter 31)
- a magnetic field is used to separate particles emitted by radioactive sources (Chapter 44)
- in a bubble chamber, particles created in collisions follow curved paths in a magnetic field, allowing the particles to be identified (Chapter 46)

Example 29.1 An Electron Moving in a Magnetic Field

AM

An electron in an old-style television picture tube moves toward the front of the tube with a speed of 8.0×10^6 m/s along the x axis (Fig. 29.6). Surrounding the neck of the tube are coils of wire that create a magnetic field of magnitude 0.025 T, directed at an angle of 60° to the x axis and lying in the xy plane. Calculate the magnetic force on the electron.

SOLUTION

Conceptualize Recall that the magnetic force on a charged particle is perpendicular to the plane formed by the velocity and magnetic field vectors. Use one of the right-hand rules in Figure 29.5 to convince yourself that the direction of the force on the electron is downward in Figure 29.6.

Categorize We evaluate the magnetic force using the *magnetic* version of the *particle in a field* model.

Analyze Use Equation 29.2 to find the magnitude of the magnetic force:

$$\begin{aligned} F_B &= |q|vB \sin \theta \\ &= (1.6 \times 10^{-19} \text{ C})(8.0 \times 10^6 \text{ m/s})(0.025 \text{ T})(\sin 60^\circ) \\ &= 2.8 \times 10^{-14} \text{ N} \end{aligned}$$

Finalize For practice using the vector product, evaluate this force in vector notation using Equation 29.1. The magnitude of the magnetic force may seem small to you, but remember that it is acting on a very small particle, the electron. To convince yourself that this is a substantial force for an electron, calculate the initial acceleration of the electron due to this force.

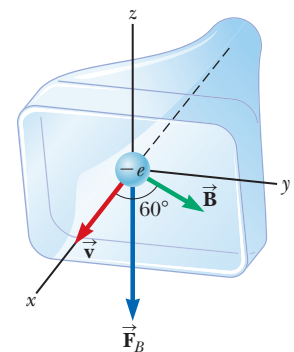


Figure 29.6 (Example 29.1) The magnetic force \vec{F}_B acting on the electron is in the negative z direction when \vec{v} and \vec{B} lie in the xy plane.

29.2 Motion of a Charged Particle in a Uniform Magnetic Field

Before we continue our discussion, some explanation of the notation used in this book is in order. To indicate the direction of \vec{B} in illustrations, we sometimes present perspective views such as those in Figure 29.6. If \vec{B} lies in the plane of the page or is present in a perspective drawing, we use green vectors or green field lines with arrowheads. In nonperspective illustrations, we depict a magnetic field perpendicular to and directed out of the page with a series of green dots, which represent the tips of arrows coming toward you (see Fig. 29.7a). In this case, the field is labeled

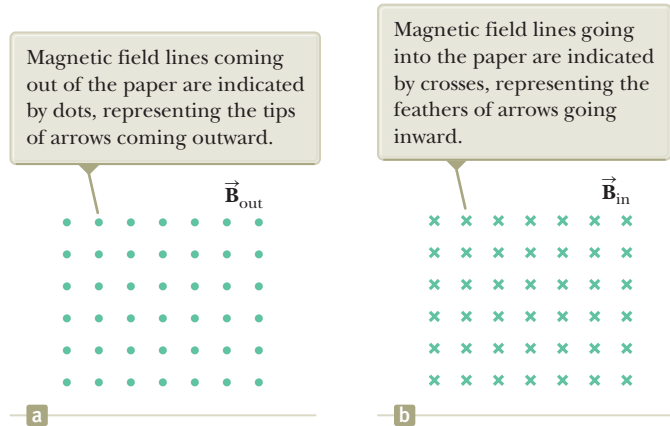


Figure 29.7 Representations of magnetic field lines perpendicular to the page.

\vec{B}_{out} . If \vec{B} is directed perpendicularly into the page, we use green crosses, which represent the feathered tails of arrows fired away from you, as in Figure 29.7b. In this case, the field is labeled \vec{B}_{in} , where the subscript “in” indicates “into the page.” The same notation with crosses and dots is also used for other quantities that might be perpendicular to the page such as forces and current directions.

In Section 29.1, we found that the magnetic force acting on a charged particle moving in a magnetic field is perpendicular to the particle’s velocity and consequently the work done by the magnetic force on the particle is zero. Now consider the special case of a positively charged particle moving in a uniform magnetic field with the initial velocity vector of the particle perpendicular to the field. Let’s assume the direction of the magnetic field is into the page as in Figure 29.8. The particle in a field model tells us that the magnetic force on the particle is perpendicular to both the magnetic field lines and the velocity of the particle. The fact that there is a force on the particle tells us to apply the particle under a net force model to the particle. As the particle changes the direction of its velocity in response to the magnetic force, the magnetic force remains perpendicular to the velocity. As we found in Section 6.1, if the force is always perpendicular to the velocity, the path of the particle is a circle! Figure 29.8 shows the particle moving in a circle in a plane perpendicular to the magnetic field. Although magnetism and magnetic forces may be new and unfamiliar to you now, we see a magnetic effect that results in something with which we are familiar: the particle in uniform circular motion model!

The particle moves in a circle because the magnetic force \vec{F}_B is perpendicular to \vec{v} and \vec{B} and has a constant magnitude qvB . As Figure 29.8 illustrates, the

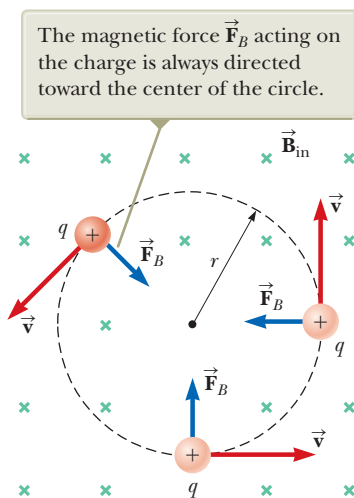


Figure 29.8 When the velocity of a charged particle is perpendicular to a uniform magnetic field, the particle moves in a circular path in a plane perpendicular to \vec{B} .

rotation is counterclockwise for a positive charge in a magnetic field directed into the page. If q were negative, the rotation would be clockwise. We use the particle under a net force model to write Newton's second law for the particle:

$$\sum F = F_B = ma$$

Because the particle moves in a circle, we also model it as a particle in uniform circular motion and we replace the acceleration with centripetal acceleration:

$$F_B = qvB = \frac{mv^2}{r}$$

This expression leads to the following equation for the radius of the circular path:

$$r = \frac{mv}{qB} \quad (29.3)$$

That is, the radius of the path is proportional to the linear momentum mv of the particle and inversely proportional to the magnitude of the charge on the particle and to the magnitude of the magnetic field. The angular speed of the particle (from Eq. 10.10) is

$$\omega = \frac{v}{r} = \frac{qB}{m} \quad (29.4)$$

The period of the motion (the time interval the particle requires to complete one revolution) is equal to the circumference of the circle divided by the speed of the particle:

$$T = \frac{2\pi r}{v} = \frac{2\pi}{\omega} = \frac{2\pi m}{qB} \quad (29.5)$$

These results show that the angular speed of the particle and the period of the circular motion do not depend on the speed of the particle or on the radius of the orbit. The angular speed ω is often referred to as the **cyclotron frequency** because charged particles circulate at this angular frequency in the type of accelerator called a *cyclotron*, which is discussed in Section 29.3.

If a charged particle moves in a uniform magnetic field with its velocity at some arbitrary angle with respect to $\vec{\mathbf{B}}$, its path is a helix. For example, if the field is directed in the x direction as shown in Figure 29.9, there is no component of force in the x direction. As a result, $a_x = 0$, and the x component of velocity remains constant. The charged particle is a particle in equilibrium in this direction. The magnetic force $q\vec{\mathbf{v}} \times \vec{\mathbf{B}}$ causes the components v_y and v_z to change in time, however, and the resulting motion is a helix whose axis is parallel to the magnetic field. The projection of the path onto the yz plane (viewed along the x axis) is a circle. (The projections of the path onto the xy and xz planes are sinusoids!) Equations 29.3 to 29.5 still apply provided v is replaced by $v_{\perp} = \sqrt{v_y^2 + v_z^2}$.

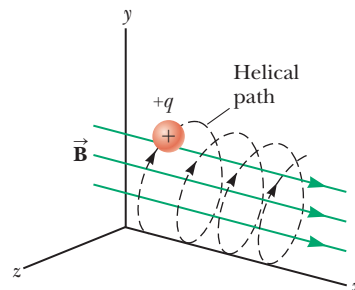


Figure 29.9 A charged particle having a velocity vector that has a component parallel to a uniform magnetic field moves in a helical path.

- Quick Quiz 29.2** A charged particle is moving perpendicular to a magnetic field in a circle with a radius r . (i) An identical particle enters the field, with \vec{v} perpendicular to \vec{B} , but with a higher speed than the first particle. Compared with the radius of the circle for the first particle, is the radius of the circular path for the second particle (a) smaller, (b) larger, or (c) equal in size? (ii) The magnitude of the magnetic field is increased. From the same choices, compare the radius of the new circular path of the first particle with the radius of its initial path.

Example 29.2 A Proton Moving Perpendicular to a Uniform Magnetic Field AM

A proton is moving in a circular orbit of radius 14 cm in a uniform 0.35-T magnetic field perpendicular to the velocity of the proton. Find the speed of the proton.

SOLUTION

Conceptualize From our discussion in this section, we know the proton follows a circular path when moving perpendicular to a uniform magnetic field. In Chapter 39, we will learn that the highest possible speed for a particle is the speed of light, 3.00×10^8 m/s, so the speed of the particle in this problem must come out to be smaller than that value.

Categorize The proton is described by both the *particle in a field* model and the *particle in uniform circular motion* model. These models led to Equation 29.3.

Analyze

Solve Equation 29.3 for the speed of the particle:

$$v = \frac{qBr}{m_p}$$

Substitute numerical values:

$$\begin{aligned} v &= \frac{(1.60 \times 10^{-19} \text{ C})(0.35 \text{ T})(0.14 \text{ m})}{1.67 \times 10^{-27} \text{ kg}} \\ &= 4.7 \times 10^6 \text{ m/s} \end{aligned}$$

Finalize The speed is indeed smaller than the speed of light, as required.

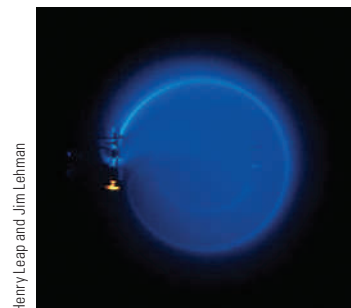
WHAT IF? What if an electron, rather than a proton, moves in a direction perpendicular to the same magnetic field with this same speed? Will the radius of its orbit be different?

Answer An electron has a much smaller mass than a proton, so the magnetic force should be able to change its velocity much more easily than that for the proton. Therefore, we expect the radius to be smaller. Equation 29.3 shows that r is proportional to m with q , B , and v the same for the electron as for the proton. Consequently, the radius will be smaller by the same factor as the ratio of masses m_e/m_p .

Example 29.3 Bending an Electron Beam AM

In an experiment designed to measure the magnitude of a uniform magnetic field, electrons are accelerated from rest through a potential difference of 350 V and then enter a uniform magnetic field that is perpendicular to the velocity vector of the electrons. The electrons travel along a curved path because of the magnetic force exerted on them, and the radius of the path is measured to be 7.5 cm. (Such a curved beam of electrons is shown in Fig. 29.10.)

(A) What is the magnitude of the magnetic field?



Henry Leap and Jim Lehman

Figure 29.10 (Example 29.3) The bending of an electron beam in a magnetic field.

continued

▶ 29.3 continued

SOLUTION

Conceptualize This example involves electrons accelerating from rest due to an electric force and then moving in a circular path due to a magnetic force. With the help of Figures 29.8 and 29.10, visualize the circular motion of the electrons.

Categorize Equation 29.3 shows that we need the speed v of the electron to find the magnetic field magnitude, and v is not given. Consequently, we must find the speed of the electron based on the potential difference through which it is accelerated. To do so, we categorize the first part of the problem by modeling an electron and the electric field as an *isolated system* in terms of *energy*. Once the electron enters the magnetic field, we categorize the second part of the problem as one involving a *particle in a field* and a *particle in uniform circular motion*, as we have done in this section.

Analyze Write the appropriate reduction of the conservation of energy equation, Equation 8.2, for the electron–electric field system:

$$\Delta K + \Delta U = 0$$

Substitute the appropriate initial and final energies:

$$\left(\frac{1}{2}m_e v^2 - 0\right) + (q\Delta V) = 0$$

Solve for the speed of the electron:

$$v = \sqrt{\frac{-2q\Delta V}{m_e}}$$

Substitute numerical values:

$$v = \sqrt{\frac{-2(-1.60 \times 10^{-19} \text{ C})(350 \text{ V})}{9.11 \times 10^{-31} \text{ kg}}} = 1.11 \times 10^7 \text{ m/s}$$

Now imagine the electron entering the magnetic field with this speed. Solve Equation 29.3 for the magnitude of the magnetic field:

$$B = \frac{m_e v}{er}$$

Substitute numerical values:

$$B = \frac{(9.11 \times 10^{-31} \text{ kg})(1.11 \times 10^7 \text{ m/s})}{(1.60 \times 10^{-19} \text{ C})(0.075 \text{ m})} = 8.4 \times 10^{-4} \text{ T}$$

(B) What is the angular speed of the electrons?

SOLUTION

Use Equation 10.10:

$$\omega = \frac{v}{r} = \frac{1.11 \times 10^7 \text{ m/s}}{0.075 \text{ m}} = 1.5 \times 10^8 \text{ rad/s}$$

Finalize The angular speed can be represented as $\omega = (1.5 \times 10^8 \text{ rad/s})(1 \text{ rev}/2\pi \text{ rad}) = 2.4 \times 10^7 \text{ rev/s}$. The electrons travel around the circle 24 million times per second! This answer is consistent with the very high speed found in part (A).

WHAT IF? What if a sudden voltage surge causes the accelerating voltage to increase to 400 V? How does that affect the angular speed of the electrons, assuming the magnetic field remains constant?

Answer The increase in accelerating voltage ΔV causes the electrons to enter the magnetic field with a higher speed v . This higher speed causes them to travel in a circle with a larger radius r . The angular speed is the ratio of v to r . Both v and r increase by the same factor, so the effects can-

cel and the angular speed remains the same. Equation 29.4 is an expression for the cyclotron frequency, which is the same as the angular speed of the electrons. The cyclotron frequency depends only on the charge q , the magnetic field B , and the mass m_e , none of which have changed. Therefore, the voltage surge has no effect on the angular speed. (In reality, however, the voltage surge may also increase the magnetic field if the magnetic field is powered by the same source as the accelerating voltage. In that case, the angular speed increases according to Eq. 29.4.)

When charged particles move in a nonuniform magnetic field, the motion is complex. For example, in a magnetic field that is strong at the ends and weak in the middle such as that shown in Figure 29.11, the particles can oscillate between two positions. A charged particle starting at one end spirals along the field lines until it reaches the other end, where it reverses its path and spirals back. This configura-

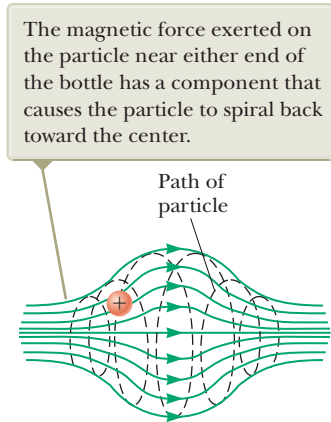


Figure 29.11 A charged particle moving in a nonuniform magnetic field (a magnetic bottle) spirals about the field and oscillates between the endpoints.

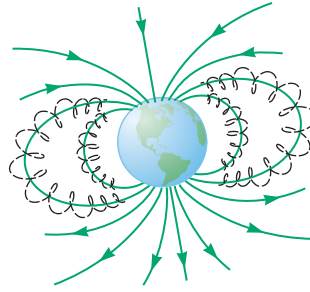


Figure 29.12 The Van Allen belts are made up of charged particles trapped by the Earth's nonuniform magnetic field. The magnetic field lines are in green, and the particle paths are dashed black lines.

tion is known as a *magnetic bottle* because charged particles can be trapped within it. The magnetic bottle has been used to confine a *plasma*, a gas consisting of ions and electrons. Such a plasma-confinement scheme could fulfill a crucial role in the control of nuclear fusion, a process that could supply us in the future with an almost endless source of energy. Unfortunately, the magnetic bottle has its problems. If a large number of particles are trapped, collisions between them cause the particles to eventually leak from the system.

The Van Allen radiation belts consist of charged particles (mostly electrons and protons) surrounding the Earth in doughnut-shaped regions (Fig. 29.12). The particles, trapped by the Earth's nonuniform magnetic field, spiral around the field lines from pole to pole, covering the distance in only a few seconds. These particles originate mainly from the Sun, but some come from stars and other heavenly objects. For this reason, the particles are called *cosmic rays*. Most cosmic rays are deflected by the Earth's magnetic field and never reach the atmosphere. Some of the particles become trapped, however, and it is these particles that make up the Van Allen belts. When the particles are located over the poles, they sometimes collide with atoms in the atmosphere, causing the atoms to emit visible light. Such collisions are the origin of the beautiful aurora borealis, or northern lights, in the northern hemisphere and the aurora australis in the southern hemisphere. Auroras are usually confined to the polar regions because the Van Allen belts are nearest the Earth's surface there. Occasionally, though, solar activity causes larger numbers of charged particles to enter the belts and significantly distort the normal magnetic field lines associated with the Earth. In these situations, an aurora can sometimes be seen at lower latitudes.

29.3 Applications Involving Charged Particles Moving in a Magnetic Field

A charge moving with a velocity \vec{v} in the presence of both an electric field \vec{E} and a magnetic field \vec{B} is described by two particle in a field models. It experiences both an electric force $q\vec{E}$ and a magnetic force $q\vec{v} \times \vec{B}$. The total force (called the Lorentz force) acting on the charge is

$$\vec{F} = q\vec{E} + q\vec{v} \times \vec{B} \quad (29.6)$$

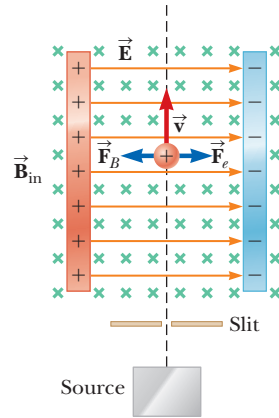


Figure 29.13 A velocity selector. When a positively charged particle is moving with velocity \vec{v} in the presence of a magnetic field directed into the page and an electric field directed to the right, it experiences an electric force $q\vec{E}$ to the right and a magnetic force $q\vec{v} \times \vec{B}$ to the left.

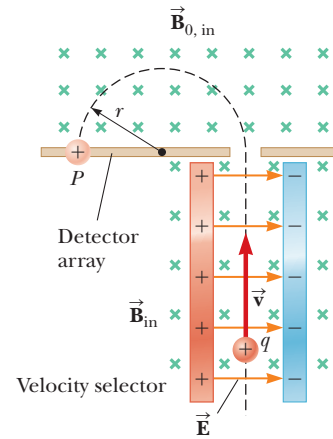


Figure 29.14 A mass spectrometer. Positively charged particles are sent first through a velocity selector and then into a region where the magnetic field \vec{B}_0 causes the particles to move in a semicircular path and strike a detector array at P .

Velocity Selector

In many experiments involving moving charged particles, it is important that all particles move with essentially the same velocity, which can be achieved by applying a combination of an electric field and a magnetic field oriented as shown in Figure 29.13. A uniform electric field is directed to the right (in the plane of the page in Fig. 29.13), and a uniform magnetic field is applied in the direction perpendicular to the electric field (into the page in Fig. 29.13). If q is positive and the velocity \vec{v} is upward, the magnetic force $q\vec{v} \times \vec{B}$ is to the left and the electric force $q\vec{E}$ is to the right. When the magnitudes of the two fields are chosen so that $qE = qvB$, the forces cancel. The charged particle is modeled as a particle in equilibrium and moves in a straight vertical line through the region of the fields. From the expression $qE = qvB$, we find that

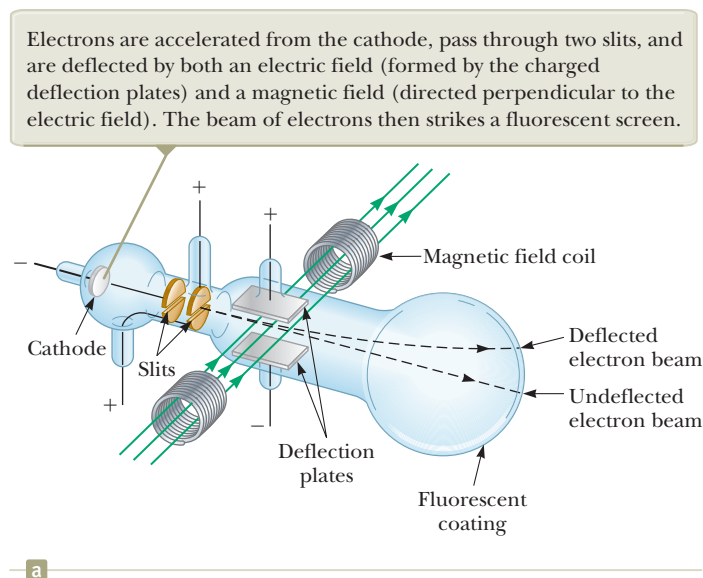
$$v = \frac{E}{B} \quad (29.7)$$

Only those particles having this speed pass undeflected through the mutually perpendicular electric and magnetic fields. The magnetic force exerted on particles moving at speeds greater than that is stronger than the electric force, and the particles are deflected to the left. Those moving at slower speeds are deflected to the right.

The Mass Spectrometer

A **mass spectrometer** separates ions according to their mass-to-charge ratio. In one version of this device, known as the *Bainbridge mass spectrometer*, a beam of ions first passes through a velocity selector and then enters a second uniform magnetic field \vec{B}_0 that has the same direction as the magnetic field in the selector (Fig. 29.14). Upon entering the second magnetic field, the ions are described by the particle in uniform circular motion model. They move in a semicircle of radius r before striking a detector array at P . If the ions are positively charged, the beam deflects to the left as Figure 29.14 shows. If the ions are negatively charged, the beam deflects to the right. From Equation 29.3, we can express the ratio m/q as

$$\frac{m}{q} = \frac{rB_0}{v}$$



Lucent Technologies Bell Laboratory, courtesy AIP
Emilio Segre Visual Archives

Figure 29.15 (a) Thomson's apparatus for measuring e/m_e . (b) J. J. Thomson (*left*) in the Cavendish Laboratory, University of Cambridge. The man on the right, Frank Baldwin Jewett, is a distant relative of John W. Jewett, Jr., coauthor of this text.

Using Equation 29.7 gives

$$\frac{m}{q} = \frac{rB_0B}{E} \quad (29.8)$$

Therefore, we can determine m/q by measuring the radius of curvature and knowing the field magnitudes B , B_0 , and E . In practice, one usually measures the masses of various isotopes of a given ion, with the ions all carrying the same charge q . In this way, the mass ratios can be determined even if q is unknown.

A variation of this technique was used by J. J. Thomson (1856–1940) in 1897 to measure the ratio e/m_e for electrons. Figure 29.15a shows the basic apparatus he used. Electrons are accelerated from the cathode and pass through two slits. They then drift into a region of perpendicular electric and magnetic fields. The magnitudes of the two fields are first adjusted to produce an undeflected beam. When the magnetic field is turned off, the electric field produces a measurable beam deflection that is recorded on the fluorescent screen. From the size of the deflection and the measured values of E and B , the charge-to-mass ratio can be determined. The results of this crucial experiment represent the discovery of the electron as a fundamental particle of nature.

The Cyclotron

A **cyclotron** is a device that can accelerate charged particles to very high speeds. The energetic particles produced are used to bombard atomic nuclei and thereby produce nuclear reactions of interest to researchers. A number of hospitals use cyclotron facilities to produce radioactive substances for diagnosis and treatment.

Both electric and magnetic forces play key roles in the operation of a cyclotron, a schematic drawing of which is shown in Figure 29.16a (page 882). The charges move inside two semicircular containers D_1 and D_2 , referred to as *dees* because of their shape like the letter D. A high-frequency alternating potential difference is applied to the dees, and a uniform magnetic field is directed perpendicular to them. A positive ion released at P near the center of the magnet in one dee moves in a semicircular path (indicated by the dashed black line in the drawing) and arrives back at the gap in a time interval $T/2$, where T is the time interval needed to make one complete trip around the two dees, given by Equation 29.5. The frequency

Pitfall Prevention 29.1

The Cyclotron Is Not the Only Type of Particle Accelerator The cyclotron is important historically because it was the first particle accelerator to produce particles with very high speeds. Cyclotrons still play important roles in medical applications and some research activities. Many other research activities make use of a different type of accelerator called a *synchrotron*.

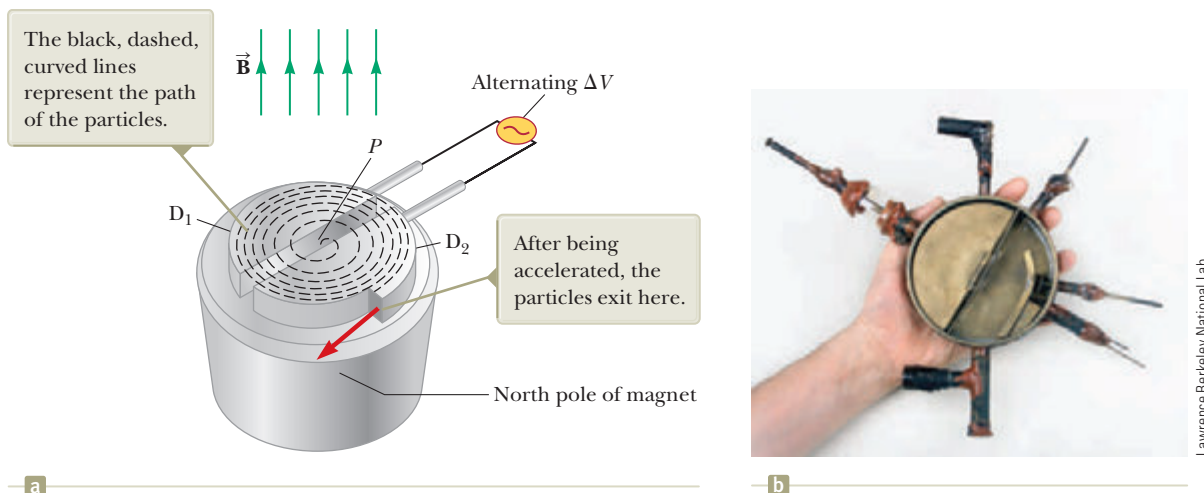


Figure 29.16 (a) A cyclotron consists of an ion source at P , two dees D_1 and D_2 across which an alternating potential difference is applied, and a uniform magnetic field. (The south pole of the magnet is not shown.) (b) The first cyclotron, invented by E. O. Lawrence and M. S. Livingston in 1934.

of the applied potential difference is adjusted so that the polarity of the dees is reversed in the same time interval during which the ion travels around one dee. If the applied potential difference is adjusted such that D_1 is at a lower electric potential than D_2 by an amount ΔV , the ion accelerates across the gap to D_1 and its kinetic energy increases by an amount $q \Delta V$. It then moves around D_1 in a semicircular path of greater radius (because its speed has increased). After a time interval $T/2$, it again arrives at the gap between the dees. By this time, the polarity across the dees has again been reversed and the ion is given another “kick” across the gap. The motion continues so that for each half-circle trip around one dee, the ion gains additional kinetic energy equal to $q \Delta V$. When the radius of its path is nearly that of the dees, the energetic ion leaves the system through the exit slit. The cyclotron’s operation depends on T being independent of the speed of the ion and of the radius of the circular path (Eq. 29.5).

We can obtain an expression for the kinetic energy of the ion when it exits the cyclotron in terms of the radius R of the dees. From Equation 29.3, we know that $v = qBR/m$. Hence, the kinetic energy is

$$K = \frac{1}{2}mv^2 = \frac{q^2 B^2 R^2}{2m} \quad (29.9)$$

When the energy of the ions in a cyclotron exceeds about 20 MeV, relativistic effects come into play. (Such effects are discussed in Chapter 39.) Observations show that T increases and the moving ions do not remain in phase with the applied potential difference. Some accelerators overcome this problem by modifying the period of the applied potential difference so that it remains in phase with the moving ions.

29.4 Magnetic Force Acting on a Current-Carrying Conductor

If a magnetic force is exerted on a single charged particle when the particle moves through a magnetic field, it should not surprise you that a current-carrying wire also experiences a force when placed in a magnetic field. The current is a collection of many charged particles in motion; hence, the resultant force exerted by the field on the wire is the vector sum of the individual forces exerted on all the charged particles making up the current. The force exerted on the particles is transmitted to the wire when the particles collide with the atoms making up the wire.

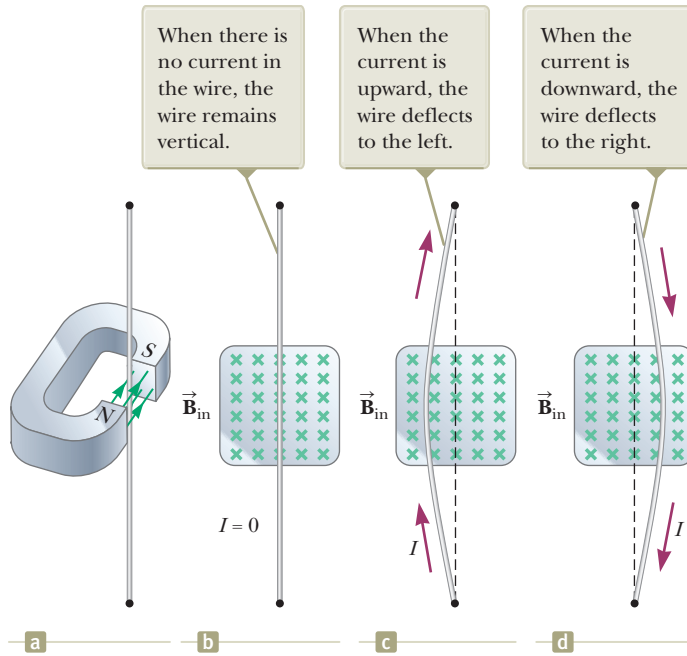


Figure 29.17 (a) A wire suspended vertically between the poles of a magnet. (b)–(d) The setup shown in (a) as seen looking at the south pole of the magnet so that the magnetic field (green crosses) is directed into the page.

One can demonstrate the magnetic force acting on a current-carrying conductor by hanging a wire between the poles of a magnet as shown in Figure 29.17a. For ease in visualization, part of the horseshoe magnet in part (a) is removed to show the end face of the south pole in parts (b) through (d) of Figure 29.17. The magnetic field is directed into the page and covers the region within the shaded squares. When the current in the wire is zero, the wire remains vertical as in Figure 29.17b. When the wire carries a current directed upward as in Figure 29.17c, however, the wire deflects to the left. If the current is reversed as in Figure 29.17d, the wire deflects to the right.

Let's quantify this discussion by considering a straight segment of wire of length L and cross-sectional area A carrying a current I in a uniform magnetic field \vec{B} as in Figure 29.18. According to the magnetic version of the particle in a field model, the magnetic force exerted on a charge q moving with a drift velocity \vec{v}_d is $q\vec{v}_d \times \vec{B}$. To find the total force acting on the wire, we multiply the force $q\vec{v}_d \times \vec{B}$ exerted on one charge by the number of charges in the segment. Because the volume of the segment is AL , the number of charges in the segment is nAL , where n is the number of mobile charge carriers per unit volume. Hence, the total magnetic force on the segment of wire of length L is

$$\vec{F}_B = (q\vec{v}_d \times \vec{B})nAL$$

We can write this expression in a more convenient form by noting that, from Equation 27.4, the current in the wire is $I = nqv_dA$. Therefore,

$$\vec{F}_B = I\vec{L} \times \vec{B} \tag{29.10}$$

where \vec{L} is a vector that points in the direction of the current I and has a magnitude equal to the length L of the segment. This expression applies only to a straight segment of wire in a uniform magnetic field.

Now consider an arbitrarily shaped wire segment of uniform cross section in a magnetic field as shown in Figure 29.19 (page 884). It follows from Equation 29.10 that the magnetic force exerted on a small segment of vector length $d\vec{s}$ in the presence of a field \vec{B} is

$$d\vec{F}_B = I d\vec{s} \times \vec{B} \tag{29.11}$$

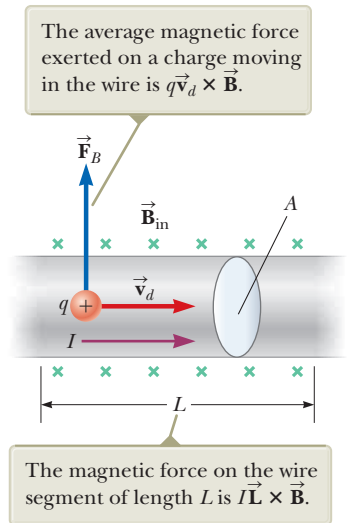
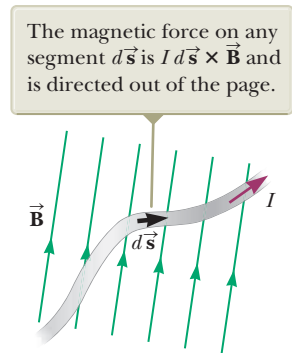


Figure 29.18 A segment of a current-carrying wire in a magnetic field \vec{B} .

◀ **Force on a segment of current-carrying wire in a uniform magnetic field**

Figure 29.19 A wire segment of arbitrary shape carrying a current I in a magnetic field $\vec{\mathbf{B}}$ experiences a magnetic force.



where $d\vec{\mathbf{F}}_B$ is directed out of the page for the directions of $\vec{\mathbf{B}}$ and $d\vec{\mathbf{s}}$ in Figure 29.19. Equation 29.11 can be considered as an alternative definition of $\vec{\mathbf{B}}$. That is, we can define the magnetic field $\vec{\mathbf{B}}$ in terms of a measurable force exerted on a current element, where the force is a maximum when $\vec{\mathbf{B}}$ is perpendicular to the element and zero when $\vec{\mathbf{B}}$ is parallel to the element.

To calculate the total force $\vec{\mathbf{F}}_B$ acting on the wire shown in Figure 29.19, we integrate Equation 29.11 over the length of the wire:

$$\vec{\mathbf{F}}_B = I \int_a^b d\vec{\mathbf{s}} \times \vec{\mathbf{B}} \quad (29.12)$$

where a and b represent the endpoints of the wire. When this integration is carried out, the magnitude of the magnetic field and the direction the field makes with the vector $d\vec{\mathbf{s}}$ may differ at different points.

- Quick Quiz 29.3** A wire carries current in the plane of this paper toward the top of the page. The wire experiences a magnetic force toward the right edge of the page. Is the direction of the magnetic field causing this force (a) in the plane of the page and toward the left edge, (b) in the plane of the page and toward the bottom edge, (c) upward out of the page, or (d) downward into the page?

Example 29.4 Force on a Semicircular Conductor

A wire bent into a semicircle of radius R forms a closed circuit and carries a current I . The wire lies in the xy plane, and a uniform magnetic field is directed along the positive y axis as in Figure 29.20. Find the magnitude and direction of the magnetic force acting on the straight portion of the wire and on the curved portion.

SOLUTION

Conceptualize Using the right-hand rule for cross products, we see that the force $\vec{\mathbf{F}}_1$ on the straight portion of the wire is out of the page and the force $\vec{\mathbf{F}}_2$ on the curved portion is into the page. Is $\vec{\mathbf{F}}_2$ larger in magnitude than $\vec{\mathbf{F}}_1$ because the length of the curved portion is longer than that of the straight portion?

Categorize Because we are dealing with a current-carrying wire in a magnetic field rather than a single charged particle, we must use Equation 29.12 to find the total force on each portion of the wire.

Analyze Notice that $d\vec{\mathbf{s}}$ is perpendicular to $\vec{\mathbf{B}}$ everywhere on the straight portion of the wire. Use Equation 29.12 to find the force on this portion:

$$\vec{\mathbf{F}}_1 = I \int_a^b d\vec{\mathbf{s}} \times \vec{\mathbf{B}} = I \int_{-R}^R B dx \hat{\mathbf{k}} = 2IRB \hat{\mathbf{k}}$$

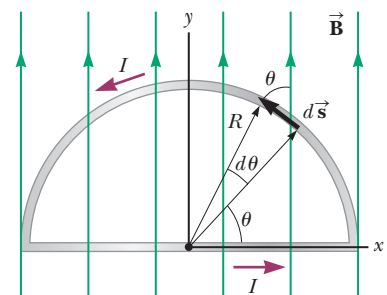


Figure 29.20 (Example 29.4) The magnetic force on the straight portion of the loop is directed out of the page, and the magnetic force on the curved portion is directed into the page.

29.4 continued

To find the magnetic force on the curved part, first write an expression for the magnetic force $d\vec{F}_2$ on the element $d\vec{s}$ in Figure 29.20:

$$(1) \quad d\vec{F}_2 = Id\vec{s} \times \vec{B} = -IB \sin \theta \, ds \hat{\mathbf{k}}$$

From the geometry in Figure 29.20, write an expression for ds :

$$(2) \quad ds = R \, d\theta$$

Substitute Equation (2) into Equation (1) and integrate over the angle θ from 0 to π :

$$\begin{aligned} \vec{F}_2 &= -\int_0^\pi IRB \sin \theta \, d\theta \hat{\mathbf{k}} = -IRB \int_0^\pi \sin \theta \, d\theta \hat{\mathbf{k}} = -IRB[-\cos \theta]_0^\pi \hat{\mathbf{k}} \\ &= IRB(\cos \pi - \cos 0)\hat{\mathbf{k}} = IRB(-1 - 1)\hat{\mathbf{k}} = -2IRB\hat{\mathbf{k}} \end{aligned}$$

Finalize Two very important general statements follow from this example. First, the force on the curved portion is the same in magnitude as the force on a straight wire between the same two points. In general, the magnetic force on a curved current-carrying wire in a uniform magnetic field is equal to that on a straight wire connecting the endpoints and carrying the same current. Furthermore, $\vec{F}_1 + \vec{F}_2 = 0$ is also a general result: the net magnetic force acting on any closed current loop in a uniform magnetic field is zero.

29.5 Torque on a Current Loop in a Uniform Magnetic Field

In Section 29.4, we showed how a magnetic force is exerted on a current-carrying conductor placed in a magnetic field. With that as a starting point, we now show that a torque is exerted on a current loop placed in a magnetic field.

Consider a rectangular loop carrying a current I in the presence of a uniform magnetic field directed parallel to the plane of the loop as shown in Figure 29.21a. No magnetic forces act on sides ① and ③ because these wires are parallel to the field; hence, $\vec{L} \times \vec{B} = 0$ for these sides. Magnetic forces do, however, act on sides ② and ④ because these sides are oriented perpendicular to the field. The magnitude of these forces is, from Equation 29.10,

$$F_2 = F_4 = IaB$$

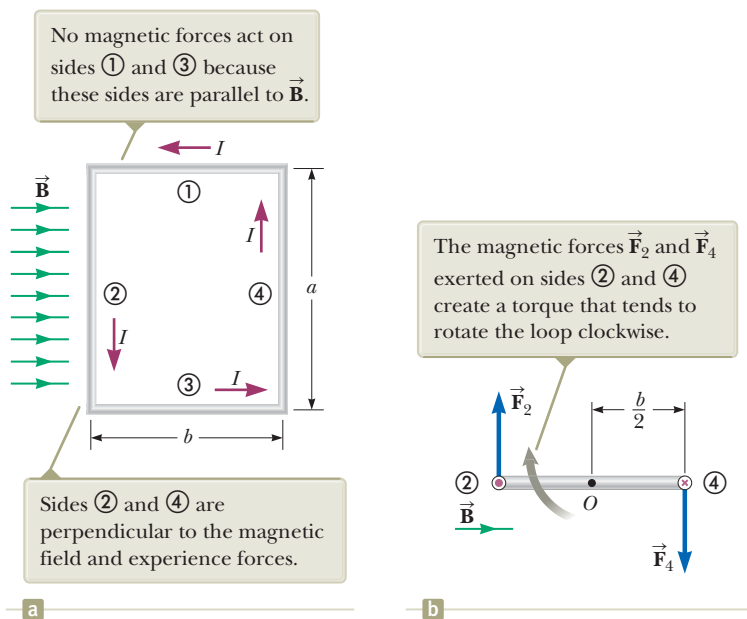


Figure 29.21 (a) Overhead view of a rectangular current loop in a uniform magnetic field. (b) Edge view of the loop sighting down sides ② and ④. The purple dot in the left circle represents current in wire ② coming toward you; the purple cross in the right circle represents current in wire ④ moving away from you.

The direction of \vec{F}_2 , the magnetic force exerted on wire ②, is out of the page in the view shown in Figure 29.20a and that of \vec{F}_4 , the magnetic force exerted on wire ④, is into the page in the same view. If we view the loop from side ③ and sight along sides ② and ④, we see the view shown in Figure 29.21b, and the two magnetic forces \vec{F}_2 and \vec{F}_4 are directed as shown. Notice that the two forces point in opposite directions but are *not* directed along the same line of action. If the loop is pivoted so that it can rotate about point O , these two forces produce about O a torque that rotates the loop clockwise. The magnitude of this torque τ_{\max} is

$$\tau_{\max} = F_2 \frac{b}{2} + F_4 \frac{b}{2} = (IaB) \frac{b}{2} + (IaB) \frac{b}{2} = IabB$$

where the moment arm about O is $b/2$ for each force. Because the area enclosed by the loop is $A = ab$, we can express the maximum torque as

$$\tau_{\max} = IAB \quad (29.13)$$

This maximum-torque result is valid only when the magnetic field is parallel to the plane of the loop. The sense of the rotation is clockwise when viewed from side ③ as indicated in Figure 29.21b. If the current direction were reversed, the force directions would also reverse and the rotational tendency would be counterclockwise.

Now suppose the uniform magnetic field makes an angle $\theta < 90^\circ$ with a line perpendicular to the plane of the loop as in Figure 29.22. For convenience, let's assume \vec{B} is perpendicular to sides ② and ④. In this case, the magnetic forces \vec{F}_1 and \vec{F}_3 exerted on sides ① and ③ cancel each other and produce no torque because they act along the same line. The magnetic forces \vec{F}_2 and \vec{F}_4 acting on sides ② and ④, however, produce a torque about *any point*. Referring to the edge view shown in Figure 29.22, we see that the moment arm of \vec{F}_2 about the point O is equal to $(b/2) \sin \theta$. Likewise, the moment arm of \vec{F}_4 about O is also equal to $(b/2) \sin \theta$. Because $F_2 = F_4 = IaB$, the magnitude of the net torque about O is

$$\begin{aligned} \tau &= F_2 \frac{b}{2} \sin \theta + F_4 \frac{b}{2} \sin \theta \\ &= IaB \left(\frac{b}{2} \sin \theta \right) + IaB \left(\frac{b}{2} \sin \theta \right) = IabB \sin \theta \\ &= IAB \sin \theta \end{aligned}$$

where $A = ab$ is the area of the loop. This result shows that the torque has its maximum value IAB when the field is perpendicular to the normal to the plane of the loop ($\theta = 90^\circ$) as discussed with regard to Figure 29.21 and is zero when the field is parallel to the normal to the plane of the loop ($\theta = 0$).

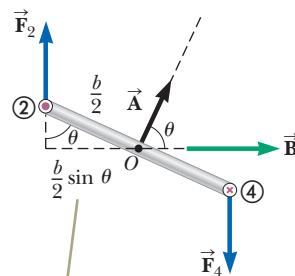


Figure 29.22 An edge view of the loop in Figure 29.21 with the normal to the loop at an angle θ with respect to the magnetic field.

When the normal to the loop makes an angle θ with the magnetic field, the moment arm for the torque is $(b/2) \sin \theta$.

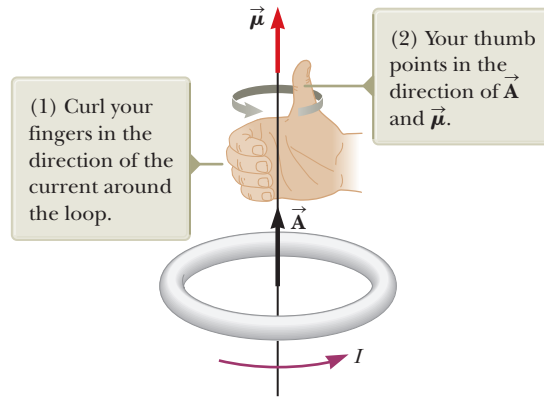


Figure 29.23 Right-hand rule for determining the direction of the vector \vec{A} for a current loop. The direction of the magnetic moment $\vec{\mu}$ is the same as the direction of \vec{A} .

A convenient vector expression for the torque exerted on a loop placed in a uniform magnetic field \vec{B} is

$$\vec{\tau} = I \vec{A} \times \vec{B} \quad (29.14)$$

where \vec{A} , the vector shown in Figure 29.22, is perpendicular to the plane of the loop and has a magnitude equal to the area of the loop. To determine the direction of \vec{A} , use the right-hand rule described in Figure 29.23. When you curl the fingers of your right hand in the direction of the current in the loop, your thumb points in the direction of \vec{A} . Figure 29.22 shows that the loop tends to rotate in the direction of decreasing values of θ (that is, such that the area vector \vec{A} rotates toward the direction of the magnetic field).

The product $I\vec{A}$ is defined to be the **magnetic dipole moment** $\vec{\mu}$ (often simply called the “magnetic moment”) of the loop:

$$\vec{\mu} \equiv I \vec{A} \quad (29.15)$$

The SI unit of magnetic dipole moment is the ampere-meter² ($A \cdot m^2$). If a coil of wire contains N loops of the same area, the magnetic moment of the coil is

$$\vec{\mu}_{\text{coil}} = NI \vec{A} \quad (29.16)$$

Using Equation 29.15, we can express the torque exerted on a current-carrying loop in a magnetic field \vec{B} as

$$\vec{\tau} = \vec{\mu} \times \vec{B} \quad (29.17)$$

This result is analogous to Equation 26.18, $\vec{\tau} = \vec{p} \times \vec{E}$, for the torque exerted on an electric dipole in the presence of an electric field \vec{E} , where \vec{p} is the electric dipole moment.

Although we obtained the torque for a particular orientation of \vec{B} with respect to the loop, the equation $\vec{\tau} = \vec{\mu} \times \vec{B}$ is valid for any orientation. Furthermore, although we derived the torque expression for a rectangular loop, the result is valid for a loop of any shape. The torque on an N -turn coil is given by Equation 29.17 by using Equation 29.16 for the magnetic moment.

In Section 26.6, we found that the potential energy of a system of an electric dipole in an electric field is given by $U_E = -\vec{p} \cdot \vec{E}$. This energy depends on the orientation of the dipole in the electric field. Likewise, the potential energy of a system of a magnetic dipole in a magnetic field depends on the orientation of the dipole in the magnetic field and is given by

$$U_B = -\vec{\mu} \cdot \vec{B} \quad (29.18)$$

◀ Torque on a current loop in a magnetic field

◀ Magnetic dipole moment of a current loop

◀ Torque on a magnetic moment in a magnetic field

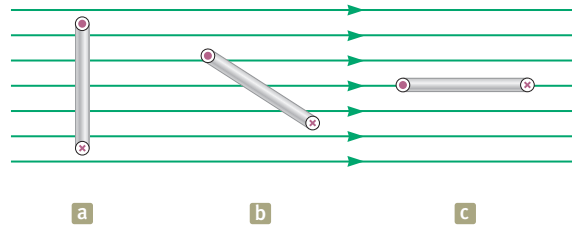
◀ Potential energy of a system of a magnetic moment in a magnetic field

This expression shows that the system has its lowest energy $U_{\min} = -\mu B$ when $\vec{\mu}$ points in the same direction as \vec{B} . The system has its highest energy $U_{\max} = +\mu B$ when $\vec{\mu}$ points in the direction opposite \vec{B} .

Imagine the loop in Figure 29.22 is pivoted at point O on sides ① and ③, so that it is free to rotate. If the loop carries current and the magnetic field is turned on, the loop is modeled as a rigid object under a net torque, with the torque given by Equation 29.17. The torque on the current loop causes the loop to rotate; this effect is exploited practically in a **motor**. Energy enters the motor by electrical transmission, and the rotating coil can do work on some device external to the motor. For example, the motor in a car's electrical window system does work on the windows, applying a force on them and moving them up or down through some displacement. We will discuss motors in more detail in Section 31.5.

- Quick Quiz 29.4** (i) Rank the magnitudes of the torques acting on the rectangular loops (a), (b), and (c) shown edge-on in Figure 29.24 from highest to lowest. All loops are identical and carry the same current. (ii) Rank the magnitudes of the net forces acting on the rectangular loops shown in Figure 29.24 from highest to lowest.

Figure 29.24 (Quick Quiz 29.4) Which current loop (seen edge-on) experiences the greatest torque, (a), (b), or (c)? Which experiences the greatest net force?



Example 29.5 The Magnetic Dipole Moment of a Coil

A rectangular coil of dimensions $5.40 \text{ cm} \times 8.50 \text{ cm}$ consists of 25 turns of wire and carries a current of 15.0 mA. A 0.350-T magnetic field is applied parallel to the plane of the coil.

- (A)** Calculate the magnitude of the magnetic dipole moment of the coil.

SOLUTION

Conceptualize The magnetic moment of the coil is independent of any magnetic field in which the loop resides, so it depends only on the geometry of the loop and the current it carries.

Categorize We evaluate quantities based on equations developed in this section, so we categorize this example as a substitution problem.

Use Equation 29.16 to calculate the magnetic moment associated with a coil consisting of N turns:

$$\begin{aligned}\mu_{\text{coil}} &= NIA = (25)(15.0 \times 10^{-3} \text{ A})(0.0540 \text{ m})(0.0850 \text{ m}) \\ &= 1.72 \times 10^{-3} \text{ A} \cdot \text{m}^2\end{aligned}$$

- (B)** What is the magnitude of the torque acting on the loop?

SOLUTION

Use Equation 29.17, noting that \vec{B} is perpendicular to $\vec{\mu}_{\text{coil}}$:

$$\begin{aligned}\tau &= \mu_{\text{coil}}B = (1.72 \times 10^{-3} \text{ A} \cdot \text{m}^2)(0.350 \text{ T}) \\ &= 6.02 \times 10^{-4} \text{ N} \cdot \text{m}\end{aligned}$$

Example 29.6 Rotating a Coil

Consider the loop of wire in Figure 29.25a. Imagine it is pivoted along side bc , which is parallel to the y axis and fastened so that side bc remains fixed and the rest of the loop hangs vertically in the gravitational field of the Earth but can rotate around side bc (Fig. 29.25b). The mass of the loop is 50.0 g , and the sides are of lengths $a = 0.200\text{ m}$ and $b = 0.100\text{ m}$. The loop carries a current of 3.50 A and is immersed in a vertical uniform magnetic field of magnitude 0.0100 T in the positive y direction (Fig. 29.25c). What angle does the plane of the loop make with the vertical?

SOLUTION

Conceptualize In the edge view of Figure 29.25b, notice that the magnetic moment of the loop is to the left. Therefore, when the loop is in the magnetic field, the magnetic torque on the loop causes it to rotate in a clockwise direction around side bc which we choose as the rotation axis. Imagine the loop making this clockwise rotation so that the plane of the loop is at some angle θ to the vertical as in Figure 29.25c. The gravitational force on the loop exerts a torque that would cause a rotation in the counter-clockwise direction if the magnetic field were turned off.

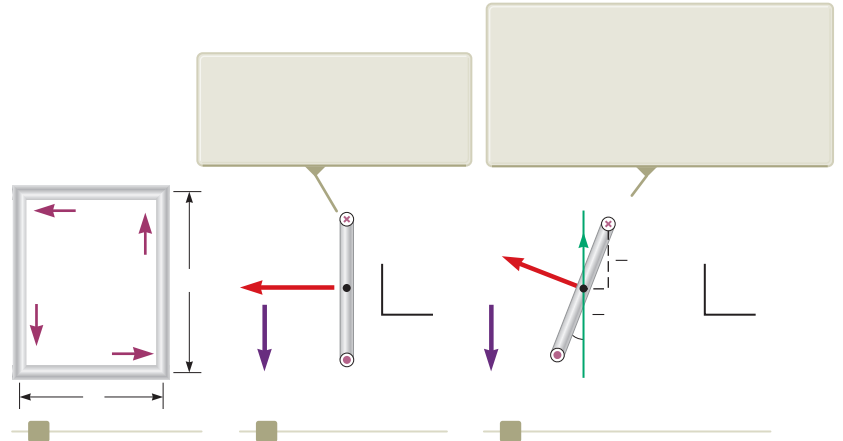


Figure 29.25 (Example 29.6) (a) The dimensions of a rectangular current loop. (b) Edge view of the loop sighting down sides ab and cd . (c) An edge view of the loop in (b) rotated through an angle with respect to the horizontal when it is placed in a magnetic field.

Categorize At some angle of the loop, the two torques described in the Conceptualize step are equal in magnitude and the loop is at rest. We therefore model the loop as a *rigid object in equilibrium*.

Analyze Evaluate the magnetic torque on the loop about side bc from Equation 29.17:

$$\tau = -\mu \sin(90^\circ - \theta) = -IAB \cos \theta \mathbf{k} = -IabB \cos \theta \mathbf{k}$$

Evaluate the gravitational torque on the loop, noting that the gravitational force can be modeled to act at the center of the loop:

$$\tau = mg \frac{a}{2} \sin \theta \mathbf{k}$$

From the rigid body in equilibrium model, add the torques and set the net torque equal to zero:

$$IabB \cos \theta = mg \frac{a}{2} \sin \theta$$

Solve for

$$\tan \theta = \frac{IaB}{mg}$$

$$\theta = \tan^{-1} \left(\frac{IaB}{mg} \right)$$

Substitute numerical values:

$$\theta = \tan^{-1} \left(\frac{(3.50\text{ A})(0.200\text{ m})(0.0100\text{ T})}{(0.0500\text{ kg})(9.80\text{ m/s}^2)} \right) = 1.64^\circ$$

Finalize The angle is relatively small, so the loop still hangs almost vertically. If the current or the magnetic field is increased, however, the angle increases as the magnetic torque becomes stronger.

29.6 The Hall Effect

When I is in the x direction and \vec{B} in the y direction, both positive and negative charge carriers are deflected upward in the magnetic field.

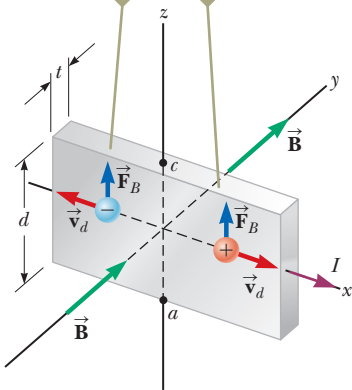


Figure 29.26 To observe the Hall effect, a magnetic field is applied to a current-carrying conductor. The Hall voltage is measured between points a and c .

When a current-carrying conductor is placed in a magnetic field, a potential difference is generated in a direction perpendicular to both the current and the magnetic field. This phenomenon, first observed by Edwin Hall (1855–1938) in 1879, is known as the *Hall effect*. The arrangement for observing the Hall effect consists of a flat conductor carrying a current I in the x direction as shown in Figure 29.26. A uniform magnetic field \vec{B} is applied in the y direction. If the charge carriers are electrons moving in the negative x direction with a drift velocity \vec{v}_d , they experience an upward magnetic force $\vec{F}_B = q\vec{v}_d \times \vec{B}$, are deflected upward, and accumulate at the upper edge of the flat conductor, leaving an excess of positive charge at the lower edge (Fig. 29.27a). This accumulation of charge at the edges establishes an electric field in the conductor and increases until the electric force on carriers remaining in the bulk of the conductor balances the magnetic force acting on the carriers. The electrons can now be described by the particle in equilibrium model, and they are no longer deflected upward. A sensitive voltmeter connected across the sample as shown in Figure 29.27 can measure the potential difference, known as the **Hall voltage** ΔV_H , generated across the conductor.

If the charge carriers are positive and hence move in the positive x direction (for rightward current) as shown in Figures 29.26 and 29.27b, they also experience an upward magnetic force $q\vec{v}_d \times \vec{B}$, which produces a buildup of positive charge on the upper edge and leaves an excess of negative charge on the lower edge. Hence, the sign of the Hall voltage generated in the sample is opposite the sign of the Hall voltage resulting from the deflection of electrons. The sign of the charge carriers can therefore be determined from measuring the polarity of the Hall voltage.

In deriving an expression for the Hall voltage, first note that the magnetic force exerted on the carriers has magnitude $qv_d B$. In equilibrium, this force is balanced by the electric force qE_H , where E_H is the magnitude of the electric field due to the charge separation (sometimes referred to as the *Hall field*). Therefore,

$$qv_d B = qE_H$$

$$E_H = v_d B$$

If d is the width of the conductor, the Hall voltage is

$$\Delta V_H = E_H d = v_d B d \quad (29.19)$$

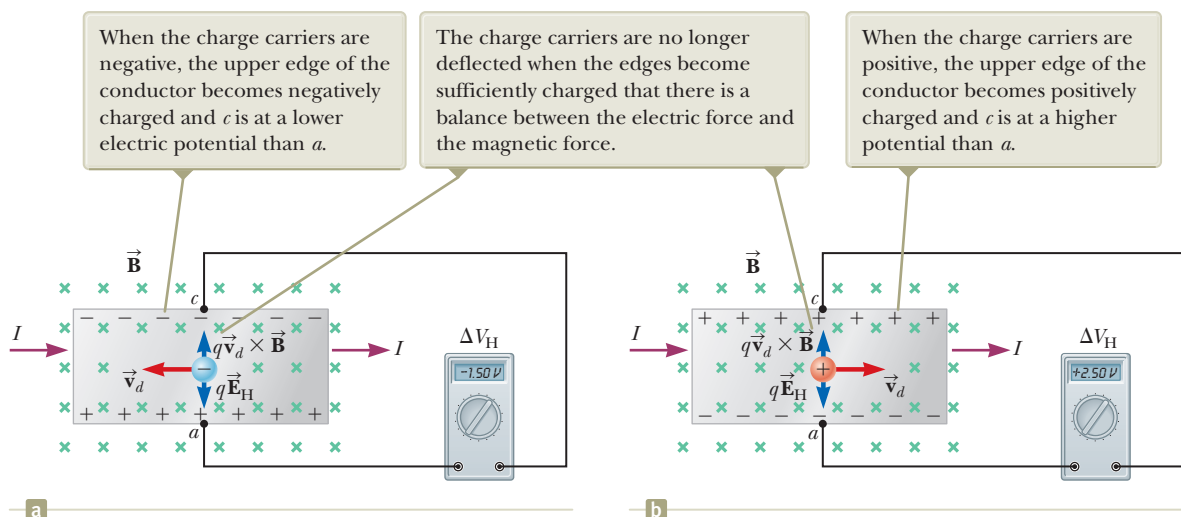


Figure 29.27 The sign of the Hall voltage depends on the sign of the charge carriers.

Therefore, the measured Hall voltage gives a value for the drift speed of the charge carriers if d and B are known.

We can obtain the charge-carrier density n by measuring the current in the sample. From Equation 27.4, we can express the drift speed as

$$v_d = \frac{I}{nqA} \quad (29.20)$$

where A is the cross-sectional area of the conductor. Substituting Equation 29.20 into Equation 29.19 gives

$$\Delta V_H = \frac{IBd}{nqA} \quad (29.21)$$

Because $A = td$, where t is the thickness of the conductor, we can also express Equation 29.21 as

$$\Delta V_H = \frac{IB}{nqt} = \frac{R_H IB}{t} \quad (29.22) \quad \leftarrow \text{The Hall voltage}$$

where $R_H = 1/nq$ is called the **Hall coefficient**. This relationship shows that a properly calibrated conductor can be used to measure the magnitude of an unknown magnetic field.

Because all quantities in Equation 29.22 other than nq can be measured, a value for the Hall coefficient is readily obtainable. The sign and magnitude of R_H give the sign of the charge carriers and their number density. In most metals, the charge carriers are electrons and the charge-carrier density determined from Hall-effect measurements is in good agreement with calculated values for such metals as lithium (Li), sodium (Na), copper (Cu), and silver (Ag), whose atoms each give up one electron to act as a current carrier. In this case, n is approximately equal to the number of conducting electrons per unit volume. This classical model, however, is not valid for metals such as iron (Fe), bismuth (Bi), and cadmium (Cd) or for semiconductors. These discrepancies can be explained only by using a model based on the quantum nature of solids.

Example 29.7 The Hall Effect for Copper

A rectangular copper strip 1.5 cm wide and 0.10 cm thick carries a current of 5.0 A. Find the Hall voltage for a 1.2-T magnetic field applied in a direction perpendicular to the strip.

SOLUTION

Conceptualize Study Figures 29.26 and 29.27 carefully and make sure you understand that a Hall voltage is developed between the top and bottom edges of the strip.

Categorize We evaluate the Hall voltage using an equation developed in this section, so we categorize this example as a substitution problem.

Assuming one electron per atom is available for conduction, find the charge-carrier density in terms of the molar mass M and density ρ of copper:

$$n = \frac{N_A}{V} = \frac{N_A \rho}{M}$$

Substitute this result into Equation 29.22:

$$\Delta V_H = \frac{IB}{nqt} = \frac{MIB}{N_A \rho qt}$$

Substitute numerical values:

$$\begin{aligned} \Delta V_H &= \frac{(0.0635 \text{ kg/mol})(5.0 \text{ A})(1.2 \text{ T})}{(6.02 \times 10^{23} \text{ mol}^{-1})(8920 \text{ kg/m}^3)(1.60 \times 10^{-19} \text{ C})(0.0010 \text{ m})} \\ &= 0.44 \mu\text{V} \end{aligned} \quad \text{continued}$$

▶ 29.7 continued

Such an extremely small Hall voltage is expected in good conductors. (Notice that the width of the conductor is not needed in this calculation.)

WHAT IF? What if the strip has the same dimensions but is made of a semiconductor? Will the Hall voltage be smaller or larger?

Answer In semiconductors, n is much smaller than it is in metals that contribute one electron per atom to the current; hence, the Hall voltage is usually larger because it varies as the inverse of n . Currents on the order of 0.1 mA are generally used for such materials. Consider a piece of silicon that has the same dimensions as the copper strip in this example and whose value for n is 1.0×10^{20} electrons/m³. Taking $B = 1.2$ T and $I = 0.10$ mA, we find that $\Delta V_H = 7.5$ mV. A potential difference of this magnitude is readily measured.

Summary

Definition

The **magnetic dipole moment** $\vec{\mu}$ of a loop carrying a current I is

$$\vec{\mu} \equiv I\vec{A} \quad (29.15)$$

where the area vector \vec{A} is perpendicular to the plane of the loop and $|\vec{A}|$ is equal to the area of the loop. The SI unit of $\vec{\mu}$ is $\text{A} \cdot \text{m}^2$.

Concepts and Principles

If a charged particle moves in a uniform magnetic field so that its initial velocity is perpendicular to the field, the particle moves in a circle, the plane of which is perpendicular to the magnetic field. The radius of the circular path is

$$r = \frac{mv}{qB} \quad (29.3)$$

where m is the mass of the particle and q is its charge. The angular speed of the charged particle is

$$\omega = \frac{qB}{m} \quad (29.4)$$

If a straight conductor of length L carries a current I , the force exerted on that conductor when it is placed in a uniform magnetic field \vec{B} is

$$\vec{F}_B = I\vec{L} \times \vec{B} \quad (29.10)$$

where the direction of \vec{L} is in the direction of the current and $|\vec{L}| = L$.

If an arbitrarily shaped wire carrying a current I is placed in a magnetic field, the magnetic force exerted on a very small segment $d\vec{s}$ is

$$d\vec{F}_B = I d\vec{s} \times \vec{B} \quad (29.11)$$

To determine the total magnetic force on the wire, one must integrate Equation 29.11 over the wire, keeping in mind that both \vec{B} and $d\vec{s}$ may vary at each point.

The torque $\vec{\tau}$ on a current loop placed in a uniform magnetic field \vec{B} is

$$\vec{\tau} = \vec{\mu} \times \vec{B} \quad (29.17)$$

The potential energy of the system of a magnetic dipole in a magnetic field is

$$U_B = -\vec{\mu} \cdot \vec{B} \quad (29.18)$$

Analysis Models for Problem Solving

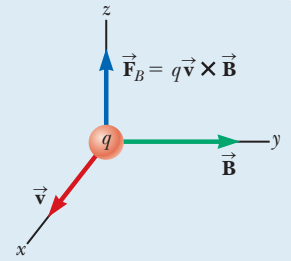
Particle in a Field (Magnetic) A source (to be discussed in Chapter 30) establishes a magnetic field $\vec{\mathbf{B}}$ throughout space. When a particle with charge q and moving with velocity $\vec{\mathbf{v}}$ is placed in that field, it experiences a magnetic force given by

$$\vec{\mathbf{F}}_B = q\vec{\mathbf{v}} \times \vec{\mathbf{B}} \quad (29.1)$$

The direction of this magnetic force is perpendicular both to the velocity of the particle and to the magnetic field. The magnitude of this force is

$$F_B = |q|vB \sin \theta \quad (29.2)$$

where θ is the smaller angle between $\vec{\mathbf{v}}$ and $\vec{\mathbf{B}}$. The SI unit of $\vec{\mathbf{B}}$ is the **tesla** (T), where $1 \text{ T} = 1 \text{ N/A} \cdot \text{m}$.



Objective Questions

1. denotes answer available in *Student Solutions Manual/Study Guide*

Objective Questions 3, 4, and 6 in Chapter 11 can be assigned with this chapter as review for the vector product.

- A spatially uniform magnetic field cannot exert a magnetic force on a particle in which of the following circumstances? There may be more than one correct statement. (a) The particle is charged. (b) The particle moves perpendicular to the magnetic field. (c) The particle moves parallel to the magnetic field. (d) The magnitude of the magnetic field changes with time. (e) The particle is at rest.
- Rank the magnitudes of the forces exerted on the following particles from largest to smallest. In your ranking, display any cases of equality. (a) an electron moving at 1 Mm/s perpendicular to a 1-mT magnetic field (b) an electron moving at 1 Mm/s parallel to a 1-mT magnetic field (c) an electron moving at 2 Mm/s perpendicular to a 1-mT magnetic field (d) a proton moving at 1 Mm/s perpendicular to a 1-mT magnetic field (e) a proton moving at 1 Mm/s at a 45° angle to a 1-mT magnetic field
- A particle with electric charge is fired into a region of space where the electric field is zero. It moves in a straight line. Can you conclude that the magnetic field in that region is zero? (a) Yes, you can. (b) No; the field might be perpendicular to the particle's velocity. (c) No; the field might be parallel to the particle's velocity. (d) No; the particle might need to have charge of the opposite sign to have a force exerted on it. (e) No; an observation of an object with *electric* charge gives no information about a *magnetic* field.
- A proton moving horizontally enters a region where a uniform magnetic field is directed perpendicular to the proton's velocity as shown in Figure OQ29.4. After the proton enters the field, does it (a) deflect downward, with its speed remaining constant; (b) deflect upward, moving in a semicircular path with constant speed, and exit the field moving to the left; (c) continue to move in the horizontal direction with constant velocity; (d) move in a circular orbit and become trapped by the field; or (e) deflect out of the plane of the paper?



Figure OQ29.4

- At a certain instant, a proton is moving in the positive x direction through a magnetic field in the negative z direction. What is the direction of the magnetic force exerted on the proton? (a) positive z direction (b) negative z direction (c) positive y direction (d) negative y direction (e) The force is zero.
- A thin copper rod 1.00 m long has a mass of 50.0 g. What is the minimum current in the rod that would allow it to levitate above the ground in a magnetic field of magnitude 0.100 T? (a) 1.20 A (b) 2.40 A (c) 4.90 A (d) 9.80 A (e) none of those answers
- Electron A is fired horizontally with speed 1.00 Mm/s into a region where a vertical magnetic field exists. Electron B is fired along the same path with speed 2.00 Mm/s. (i) Which electron has a larger magnetic force exerted on it? (a) A does. (b) B does. (c) The forces have the same nonzero magnitude. (d) The forces are both zero. (ii) Which electron has a path that curves more sharply? (a) A does. (b) B does. (c) The particles follow the same curved path. (d) The particles continue to go straight.
- Classify each of the following statements as a characteristic (a) of electric forces only, (b) of magnetic forces only, (c) of both electric and magnetic forces, or (d) of neither electric nor magnetic forces. (i) The force is proportional to the magnitude of the field exerting it. (ii) The force is proportional to the magnitude of the charge of the object on which the force is exerted. (iii) The force exerted on a negatively charged object is opposite in direction to the force on a positive charge. (iv) The force exerted on a stationary charged object is nonzero. (v) The force exerted on a moving charged

- object is zero. (vi) The force exerted on a charged object is proportional to its speed. (vii) The force exerted on a charged object cannot alter the object's speed. (viii) The magnitude of the force depends on the charged object's direction of motion.
9. An electron moves horizontally across the Earth's equator at a speed of 2.50×10^6 m/s and in a direction 35.0° N of E. At this point, the Earth's magnetic field has a direction due north, is parallel to the surface, and has a value of 3.00×10^{-5} T. What is the force acting on the electron due to its interaction with the Earth's magnetic field? (a) 6.88×10^{-18} N due west (b) 6.88×10^{-18} N toward the Earth's surface (c) 9.83×10^{-18} N toward the Earth's surface (d) 9.83×10^{-18} N away from the Earth's surface (e) 4.00×10^{-18} N away from the Earth's surface
10. A charged particle is traveling through a uniform magnetic field. Which of the following statements are true of the magnetic field? There may be more than one correct statement. (a) It exerts a force on the particle parallel to the field. (b) It exerts a force on the particle along the direction of its motion. (c) It increases the kinetic energy of the particle. (d) It exerts a force that is perpendicular to the direction of motion. (e) It does not change the magnitude of the momentum of the particle.
11. In the velocity selector shown in Figure 29.13, electrons with speed $v = E/B$ follow a straight path. Electrons moving significantly faster than this speed through the same selector will move along what kind of path? (a) a circle (b) a parabola (c) a straight line (d) a more complicated trajectory
12. Answer each question yes or no. Assume the motions and currents mentioned are along the x axis and fields are in the y direction. (a) Does an electric field exert a force on a stationary charged object? (b) Does a magnetic field do so? (c) Does an electric field exert a force on a moving charged object? (d) Does a magnetic field do so? (e) Does an electric field exert a force on a straight current-carrying wire? (f) Does a magnetic field do so? (g) Does an electric field exert a force on a beam of moving electrons? (h) Does a magnetic field do so?
13. A magnetic field exerts a torque on each of the current-carrying single loops of wire shown in Figure OQ29.13. The loops lie in the xy plane, each carrying the same magnitude current, and the uniform magnetic field points in the positive x direction. Rank the loops by the magnitude of the torque exerted on them by the field from largest to smallest.

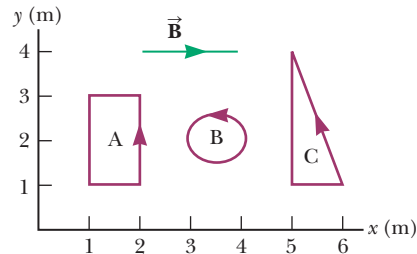


Figure OQ29.13

Conceptual Questions

1. denotes answer available in *Student Solutions Manual/Study Guide*

- Can a constant magnetic field set into motion an electron initially at rest? Explain your answer.
- Explain why it is not possible to determine the charge and the mass of a charged particle separately by measuring accelerations produced by electric and magnetic forces on the particle.
- Is it possible to orient a current loop in a uniform magnetic field such that the loop does not tend to rotate? Explain.
- How can the motion of a moving charged particle be used to distinguish between a magnetic field and an electric field? Give a specific example to justify your argument.
- How can a current loop be used to determine the presence of a magnetic field in a given region of space?
- Charged particles from outer space, called cosmic rays, strike the Earth more frequently near the poles than near the equator. Why?
- Two charged particles are projected in the same direction into a magnetic field perpendicular to their velocities. If the particles are deflected in opposite directions, what can you say about them?

Problems

WebAssign The problems found in this chapter may be assigned online in Enhanced WebAssign

1. straightforward; 2. intermediate;
3. challenging

1. full solution available in the *Student Solutions Manual/Study Guide*

AMT Analysis Model tutorial available in Enhanced WebAssign

GP Guided Problem

M Master It tutorial available in Enhanced WebAssign

W Watch It video solution available in Enhanced WebAssign

Section 29.1 Analysis Model: Particle in a Field (Magnetic)

Problems 1–4, 6–7, and 10 in Chapter 11 can be assigned with this section as review for the vector product.

- At the equator, near the surface of the Earth, the magnetic field is approximately $50.0 \mu\text{T}$ northward, and the electric field is about 100 N/C downward in fair weather. Find the gravitational, electric, and magnetic forces on an electron in this environment, assuming that the electron has an instantaneous velocity of $6.00 \times 10^6 \text{ m/s}$ directed to the east.
- Determine the initial direction of the deflection of **W** charged particles as they enter the magnetic fields shown in Figure P29.2.

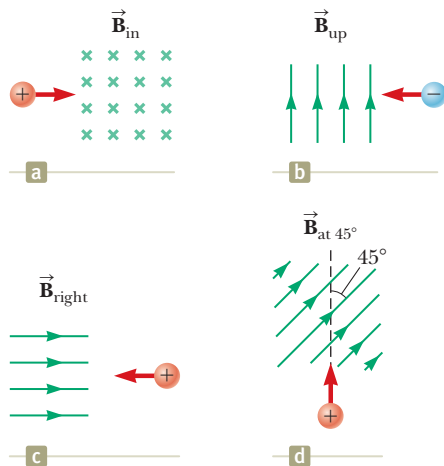


Figure P29.2

- Find the direction of the magnetic field acting on a positively charged particle moving in the various situations shown in Figure P29.3 if the direction of the magnetic force acting on it is as indicated.

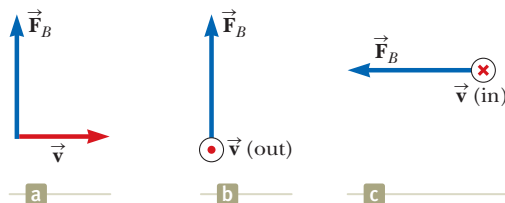


Figure P29.3

- Consider an electron near the Earth's equator. In which direction does it tend to deflect if its velocity is (a) directed downward? (b) Directed northward? (c) Directed westward? (d) Directed southeastward?
- A proton is projected into a magnetic field that is directed along the positive x axis. Find the direction of the magnetic force exerted on the proton for each of the following directions of the proton's velocity: (a) the positive y direction, (b) the negative y direction, (c) the positive x direction.

- A proton moving at $4.00 \times 10^6 \text{ m/s}$ through a magnetic field of magnitude 1.70 T experiences a magnetic force of magnitude $8.20 \times 10^{-13} \text{ N}$. What is the angle between the proton's velocity and the field?
- An electron is accelerated through $2.40 \times 10^3 \text{ V}$ from rest and then enters a uniform 1.70-T magnetic field. What are (a) the maximum and (b) the minimum values of the magnetic force this particle experiences?
- A proton moves with a velocity of $\vec{v} = (2\hat{i} - 4\hat{j} + \hat{k}) \text{ m/s}$ in a region in which the magnetic field is $\vec{B} = (\hat{i} + 2\hat{j} - \hat{k})\text{T}$. What is the magnitude of the magnetic force this particle experiences?
- A proton travels with a speed of $5.02 \times 10^6 \text{ m/s}$ in a direction that makes an angle of 60.0° with the direction of a magnetic field of magnitude 0.180 T in the positive x direction. What are the magnitudes of (a) the magnetic force on the proton and (b) the proton's acceleration?
- A laboratory electromagnet produces a magnetic field of magnitude 1.50 T . A proton moves through this field with a speed of $6.00 \times 10^6 \text{ m/s}$. (a) Find the magnitude of the maximum magnetic force that could be exerted on the proton. (b) What is the magnitude of the maximum acceleration of the proton? (c) Would the field exert the same magnetic force on an electron moving through the field with the same speed? (d) Would the electron experience the same acceleration? Explain.
- A proton moves perpendicular to a uniform magnetic field \vec{B} at a speed of $1.00 \times 10^7 \text{ m/s}$ and experiences an acceleration of $2.00 \times 10^{13} \text{ m/s}^2$ in the positive x direction when its velocity is in the positive z direction. Determine the magnitude and direction of the field.

- Review.** A charged particle of mass 1.50 g is moving at a speed of $1.50 \times 10^4 \text{ m/s}$. Suddenly, a uniform magnetic field of magnitude 0.150 mT in a direction perpendicular to the particle's velocity is turned on and then turned off in a time interval of 1.00 s . During this time interval, the magnitude and direction of the velocity of the particle undergo a negligible change, but the particle moves by a distance of 0.150 m in a direction perpendicular to the velocity. Find the charge on the particle.

Section 29.2 Motion of a Charged Particle in a Uniform Magnetic Field

- An electron moves in a circular path perpendicular to a uniform magnetic field with a magnitude of 2.00 mT . If the speed of the electron is $1.50 \times 10^7 \text{ m/s}$, determine (a) the radius of the circular path and (b) the time interval required to complete one revolution.
- An accelerating voltage of $2.50 \times 10^3 \text{ V}$ is applied to an electron gun, producing a beam of electrons originally traveling horizontally north in vacuum toward the center of a viewing screen 35.0 cm away. What are (a) the magnitude and (b) the direction of the deflection on

the screen caused by the Earth's gravitational field? What are (c) the magnitude and (d) the direction of the deflection on the screen caused by the vertical component of the Earth's magnetic field, taken as $20.0 \mu\text{T}$ down? (e) Does an electron in this vertical magnetic field move as a projectile, with constant vector acceleration perpendicular to a constant northward component of velocity? (f) Is it a good approximation to assume it has this projectile motion? Explain.

15. A proton (charge $+e$, mass m_p), a deuteron (charge $+e$, mass $2m_p$), and an alpha particle (charge $+2e$, mass $4m_p$) are accelerated from rest through a common potential difference ΔV . Each of the particles enters a uniform magnetic field \vec{B} , with its velocity in a direction perpendicular to \vec{B} . The proton moves in a circular path of radius r_p . In terms of r_p , determine (a) the radius r_d of the circular orbit for the deuteron and (b) the radius r_α for the alpha particle.

16. A particle with charge q and kinetic energy K travels in a uniform magnetic field of magnitude B . If the particle moves in a circular path of radius R , find expressions for (a) its speed and (b) its mass.

17. Review. One electron collides elastically with a second electron initially at rest. After the collision, the radii of their trajectories are 1.00 cm and 2.40 cm . The trajectories are perpendicular to a uniform magnetic field of magnitude 0.0440 T . Determine the energy (in keV) of the incident electron.

18. Review. One electron collides elastically with a second electron initially at rest. After the collision, the radii of their trajectories are r_1 and r_2 . The trajectories are perpendicular to a uniform magnetic field of magnitude B . Determine the energy of the incident electron.

19. Review. An electron moves in a circular path perpendicular to a constant magnetic field of magnitude 1.00 mT . The angular momentum of the electron about the center of the circle is $4.00 \times 10^{-25} \text{ kg} \cdot \text{m}^2/\text{s}$. Determine (a) the radius of the circular path and (b) the speed of the electron.

20. Review. A 30.0-g metal ball having net charge $Q = 5.00 \mu\text{C}$ is thrown out of a window horizontally north at a speed $v = 20.0 \text{ m/s}$. The window is at a height $h = 20.0 \text{ m}$ above the ground. A uniform, horizontal magnetic field of magnitude $B = 0.0100 \text{ T}$ is perpendicular to the plane of the ball's trajectory and directed toward the west. (a) Assuming the ball follows the same trajectory as it would in the absence of the magnetic field, find the magnetic force acting on the ball just before it hits the ground. (b) Based on the result of part (a), is it justified for three-significant-digit precision to assume the trajectory is unaffected by the magnetic field? Explain.

21. A cosmic-ray proton in interstellar space has an energy of 10.0 MeV and executes a circular orbit having a radius equal to that of Mercury's orbit around the Sun ($5.80 \times 10^{10} \text{ m}$). What is the magnetic field in that region of space?

22. Assume the region to the right of a certain plane contains a uniform magnetic field of magnitude 1.00 mT and the field is zero in the region to the left of the plane as shown in Figure P29.22. An electron, originally traveling perpendicular to the boundary plane, passes into the region of the field. (a) Determine the time interval required for the electron to leave the "field-filled" region, noting that the electron's path is a semicircle. (b) Assuming the maximum depth of penetration into the field is 2.00 cm , find the kinetic energy of the electron.

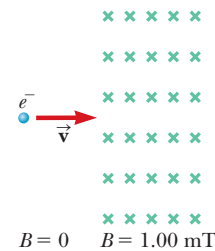


Figure P29.22

23. A singly charged ion of mass m is accelerated from rest by a potential difference ΔV . It is then deflected by a uniform magnetic field (perpendicular to the ion's velocity) into a semicircle of radius R . Now a doubly charged ion of mass m' is accelerated through the same potential difference and deflected by the same magnetic field into a semicircle of radius $R' = 2R$. What is the ratio of the masses of the ions?

Section 29.3 Applications Involving Charged Particles Moving in a Magnetic Field

24. A cyclotron designed to accelerate protons has a magnetic field of magnitude 0.450 T over a region of radius 1.20 m . What are (a) the cyclotron frequency and (b) the maximum speed acquired by the protons?

25. Consider the mass spectrometer shown schematically in Figure 29.14. The magnitude of the electric field between the plates of the velocity selector is $2.50 \times 10^3 \text{ V/m}$, and the magnetic field in both the velocity selector and the deflection chamber has a magnitude of 0.0350 T . Calculate the radius of the path for a singly charged ion having a mass $m = 2.18 \times 10^{-26} \text{ kg}$.

26. Singly charged uranium-238 ions are accelerated through a potential difference of 2.00 kV and enter a uniform magnetic field of magnitude 1.20 T directed perpendicular to their velocities. (a) Determine the radius of their circular path. (b) Repeat this calculation for uranium-235 ions. (c) **What If?** How does the ratio of these path radii depend on the accelerating voltage? (d) On the magnitude of the magnetic field?

27. A cyclotron (Fig. 29.16) designed to accelerate protons has an outer radius of 0.350 m . The protons are emitted nearly at rest from a source at the center and are accelerated through 600 V each time they cross the gap between the dees. The dees are between the poles of an electromagnet where the field is 0.800 T . (a) Find the cyclotron frequency for the protons in

this cyclotron. Find (b) the speed at which protons exit the cyclotron and (c) their maximum kinetic energy. (d) How many revolutions does a proton make in the cyclotron? (e) For what time interval does the proton accelerate?

28. A particle in the cyclotron shown in Figure 29.16a gains energy $q \Delta V$ from the alternating power supply each time it passes from one dee to the other. The time interval for each full orbit is

$$T = \frac{2\pi}{\omega} = \frac{2\pi m}{qB}$$

so the particle's average rate of increase in energy is

$$\frac{2q \Delta V}{T} = \frac{q^2 B \Delta V}{\pi m}$$

Notice that this power input is constant in time. On the other hand, the rate of increase in the radius r of its path is *not* constant. (a) Show that the rate of increase in the radius r of the particle's path is given by

$$\frac{dr}{dt} = \frac{1}{r} \frac{\Delta V}{\pi B}$$

(b) Describe how the path of the particles in Figure 29.16a is consistent with the result of part (a). (c) At what rate is the radial position of the protons in a cyclotron increasing immediately before the protons leave the cyclotron? Assume the cyclotron has an outer radius of 0.350 m, an accelerating voltage of $\Delta V = 600$ V, and a magnetic field of magnitude 0.800 T. (d) By how much does the radius of the protons' path increase during their last full revolution?

29. A velocity selector consists of electric and magnetic fields described by the expressions $\vec{E} = E\hat{k}$ and $\vec{B} = B\hat{j}$, with $B = 15.0$ mT. Find the value of E such that a 750-eV electron moving in the negative x direction is undeflected.
30. In his experiments on "cathode rays" during which he discovered the electron, J. J. Thomson showed that the same beam deflections resulted with tubes having cathodes made of *different* materials and containing *various* gases before evacuation. (a) Are these observations important? Explain your answer. (b) When he applied various potential differences to the deflection plates and turned on the magnetic coils, alone or in combination with the deflection plates, Thomson observed that the fluorescent screen continued to show a *single small* glowing patch. Argue whether his observation is important. (c) Do calculations to show that the charge-to-mass ratio Thomson obtained was huge compared with that of any macroscopic object or of any ionized atom or molecule. How can one make sense of this comparison? (d) Could Thomson observe any deflection of the beam due to gravitation? Do a calculation to argue for your answer. *Note:* To obtain a visibly glowing patch on the fluorescent screen, the potential difference between the slits and the cathode must be 100 V or more.

31. The picture tube in an old black-and-white television uses magnetic deflection coils rather than electric

deflection plates. Suppose an electron beam is accelerated through a 50.0-kV potential difference and then through a region of uniform magnetic field 1.00 cm wide. The screen is located 10.0 cm from the center of the coils and is 50.0 cm wide. When the field is turned off, the electron beam hits the center of the screen. Ignoring relativistic corrections, what field magnitude is necessary to deflect the beam to the side of the screen?

Section 29.4 Magnetic Force Acting on a Current-Carrying Conductor

32. A straight wire carrying a 3.00-A current is placed in a uniform magnetic field of magnitude 0.280 T directed perpendicular to the wire. (a) Find the magnitude of the magnetic force on a section of the wire having a length of 14.0 cm. (b) Explain why you can't determine the direction of the magnetic force from the information given in the problem.
33. A conductor carrying a current $I = 15.0$ A is directed along the positive x axis and perpendicular to a uniform magnetic field. A magnetic force per unit length of 0.120 N/m acts on the conductor in the negative y direction. Determine (a) the magnitude and (b) the direction of the magnetic field in the region through which the current passes.
34. A wire 2.80 m in length carries a current of 5.00 A in a region where a uniform magnetic field has a magnitude of 0.390 T. Calculate the magnitude of the magnetic force on the wire assuming the angle between the magnetic field and the current is (a) 60.0° , (b) 90.0° , and (c) 120° .
35. A wire carries a steady current of 2.40 A. A straight section of the wire is 0.750 m long and lies along the x axis within a uniform magnetic field, $\vec{B} = 1.60\hat{k}$ T. If the current is in the positive x direction, what is the magnetic force on the section of wire?
36. *Why is the following situation impossible?* Imagine a copper wire with radius 1.00 mm encircling the Earth at its magnetic equator, where the field direction is horizontal. A power supply delivers 100 MW to the wire to maintain a current in it, in a direction such that the magnetic force from the Earth's magnetic field is upward. Due to this force, the wire is levitated immediately above the ground.
37. **Review.** A rod of mass 0.720 kg and radius 6.00 cm rests on two parallel rails (Fig. P29.37) that are $d = 12.0$ cm apart and $L = 45.0$ cm long. The rod carries a

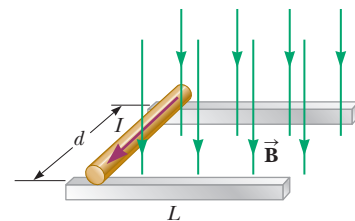


Figure P29.37 Problems 37 and 38.

current of $I = 48.0 \text{ A}$ in the direction shown and rolls along the rails without slipping. A uniform magnetic field of magnitude 0.240 T is directed perpendicular to the rod and the rails. If it starts from rest, what is the speed of the rod as it leaves the rails?

38. Review. A rod of mass m and radius R rests on two parallel rails (Fig. P29.37) that are a distance d apart and have a length L . The rod carries a current I in the direction shown and rolls along the rails without slipping. A uniform magnetic field B is directed perpendicular to the rod and the rails. If it starts from rest, what is the speed of the rod as it leaves the rails?

39. A wire having a mass per unit length of 0.500 g/cm carries a 2.00-A current horizontally to the south. What are (a) the direction and (b) the magnitude of the minimum magnetic field needed to lift this wire vertically upward?

40. Consider the system pictured in Figure P29.40. A 15.0-cm horizontal wire of mass 15.0 g is placed between two thin, vertical conductors, and a uniform magnetic field acts perpendicular to the page. The wire is free to move vertically without friction on the two vertical conductors. When a 5.00-A current is directed as shown in the figure, the horizontal wire moves upward at constant velocity in the presence of gravity. (a) What forces act on the horizontal wire, and (b) under what condition is the wire able to move upward at constant velocity? (c) Find the magnitude and direction of the minimum magnetic field required to move the wire at constant speed. (d) What happens if the magnetic field exceeds this minimum value?

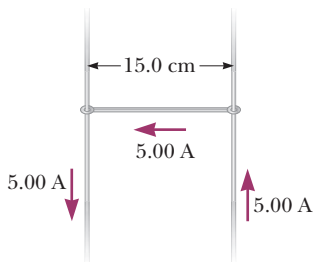


Figure P29.40

41. A horizontal power line of length 58.0 m carries a current of 2.20 kA northward as shown in Figure P29.41. The Earth's magnetic field at this location has a magnitude of $5.00 \times 10^{-5} \text{ T}$. The field at this location is directed toward the north at an angle 65.0° below the

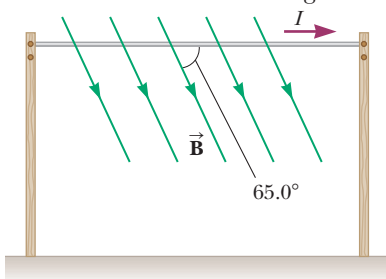


Figure P29.41

power line. Find (a) the magnitude and (b) the direction of the magnetic force on the power line.

42. A strong magnet is placed under a horizontal conducting ring of radius r that carries current I as shown in Figure P29.42. If the magnetic field \vec{B} makes an angle θ with the vertical at the ring's location, what are (a) the magnitude and (b) the direction of the resultant magnetic force on the ring?

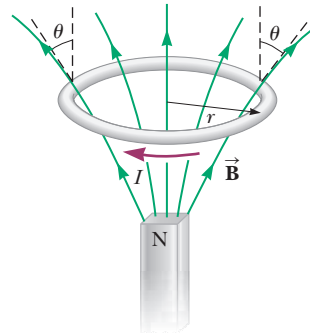


Figure P29.42

43. Assume the Earth's magnetic field is $52.0 \mu\text{T}$ northward at 60.0° below the horizontal in Atlanta, Georgia. A tube in a neon sign stretches between two diagonally opposite corners of a shop window—which lies in a north-south vertical plane—and carries current 35.0 mA . The current enters the tube at the bottom south corner of the shop's window. It exits at the opposite corner, which is 1.40 m farther north and 0.850 m higher up. Between these two points, the glowing tube spells out DONUTS. Determine the total vector magnetic force on the tube. *Hint:* You may use the first "important general statement" presented in the Finalize section of Example 29.4.

44. In Figure P29.44, the cube is 40.0 cm on each edge. Four straight segments of wire— ab , bc , cd , and da —form a closed loop that carries a current $I = 5.00 \text{ A}$ in the direction shown. A uniform magnetic field of magnitude $B = 0.0200 \text{ T}$ is in the positive y direction. Determine the magnetic force vector on (a) ab , (b) bc , (c) cd , and (d) da . (e) Explain how you could find the force exerted on the fourth of these segments from the forces on the other three, without further calculation involving the magnetic field.

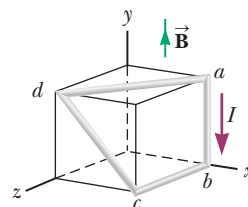


Figure P29.44

Section 29.5 Torque on a Current Loop in a Uniform Magnetic Field

45. A typical magnitude of the external magnetic field in a cardiac catheter ablation procedure using remote

- magnetic navigation is $B = 0.080$ T. Suppose that the permanent magnet in the catheter used in the procedure is inside the left atrium of the heart and subject to this external magnetic field. The permanent magnet has a magnetic moment of $0.10 \text{ A} \cdot \text{m}^2$. The orientation of the permanent magnet is 30° from the direction of the external magnetic field lines. (a) What is the magnitude of the torque on the tip of the catheter containing this permanent magnet? (b) What is the potential energy of the system consisting of the permanent magnet in the catheter and the magnetic field provided by the external magnets?
46. A 50.0-turn circular coil of radius 5.00 cm can be oriented in any direction in a uniform magnetic field having a magnitude of 0.500 T. If the coil carries a current of 25.0 mA, find the magnitude of the maximum possible torque exerted on the coil.
47. A magnetized sewing needle has a magnetic moment of $9.70 \text{ mA} \cdot \text{m}^2$. At its location, the Earth's magnetic field is $55.0 \mu\text{T}$ northward at 48.0° below the horizontal. Identify the orientations of the needle that represent (a) the minimum potential energy and (b) the maximum potential energy of the needle-field system. (c) How much work must be done on the system to move the needle from the minimum to the maximum potential energy orientation?
48. A current of 17.0 mA is maintained in a single circular loop of 2.00 m circumference. A magnetic field of 0.800 T is directed parallel to the plane of the loop. (a) Calculate the magnetic moment of the loop. (b) What is the magnitude of the torque exerted by the magnetic field on the loop?
49. An eight-turn coil encloses an elliptical area having a major axis of 40.0 cm and a minor axis of 30.0 cm (Fig. P29.49). The coil lies in the plane of the page and has a 6.00-A current flowing clockwise around it. If the coil is in a uniform magnetic field of 2.00×10^{-4} T directed toward the left of the page, what is the magnitude of the torque on the coil? *Hint:* The area of an ellipse is $A = \pi ab$, where a and b are, respectively, the semimajor and semiminor axes of the ellipse.

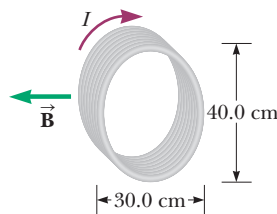


Figure P29.49

50. The rotor in a certain electric motor is a flat, rectangular coil with 80 turns of wire and dimensions 2.50 cm by 4.00 cm. The rotor rotates in a uniform magnetic field of 0.800 T. When the plane of the rotor is perpendicular to the direction of the magnetic field, the rotor carries a current of 10.0 mA. In this orientation, the magnetic moment of the rotor is directed opposite the magnetic field. The rotor then turns through one-

half revolution. This process is repeated to cause the rotor to turn steadily at an angular speed of 3.60×10^3 rev/min. (a) Find the maximum torque acting on the rotor. (b) Find the peak power output of the motor. (c) Determine the amount of work performed by the magnetic field on the rotor in every full revolution. (d) What is the average power of the motor?

51. A rectangular coil consists of $N = 100$ closely wrapped turns and has dimensions $a = 0.400$ m and $b = 0.300$ m. The coil is hinged along the y axis, and its plane makes an angle $\theta = 30.0^\circ$ with the x axis (Fig. P29.51). (a) What is the magnitude of the torque exerted on the coil by a uniform magnetic field $B = 0.800$ T directed in the positive x direction when the current is $I = 1.20$ A in the direction shown? (b) What is the expected direction of rotation of the coil?

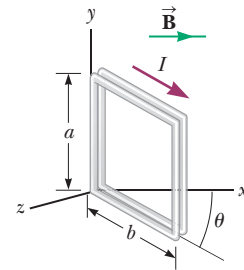


Figure P29.51

52. A rectangular loop of wire has dimensions 0.500 m by 0.300 m. The loop is pivoted at the x axis and lies in the xy plane as shown in Figure P29.52. A uniform magnetic field of magnitude 1.50 T is directed at an angle of 40.0° with respect to the y axis with field lines parallel to the yz plane. The loop carries a current of 0.900 A in the direction shown. (Ignore gravitation.) We wish to evaluate the torque on the current loop. (a) What is the direction of the magnetic force exerted on wire segment ab ? (b) What is the direction of the torque associated with this force about an axis through the origin? (c) What is the direction of the magnetic force exerted on segment cd ? (d) What is the direction of the torque associated with this force about an axis through the origin? (e) Can the forces examined in parts (a) and (c) combine to cause the loop to rotate around the x axis? (f) Can they affect the motion of the loop in any way? Explain. (g) What is the direction of the magnetic force exerted on segment bc ? (h) What is the direction of the torque associated with this force about an axis through the origin? (i) What is the torque on segment ad about an axis through the origin? (j) From the point of view of Figure P29.52, once the loop is released from rest at

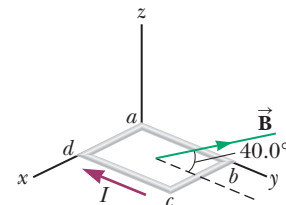


Figure P29.52

the position shown, will it rotate clockwise or counterclockwise around the x axis? (k) Compute the magnitude of the magnetic moment of the loop. (l) What is the angle between the magnetic moment vector and the magnetic field? (m) Compute the torque on the loop using the results to parts (k) and (l).

- 53.** A wire is formed into a circle having a diameter of **W** 10.0 cm and is placed in a uniform magnetic field of 3.00 mT. The wire carries a current of 5.00 A. Find (a) the maximum torque on the wire and (b) the range of potential energies of the wire–field system for different orientations of the circle.

Section 29.6 The Hall Effect

- 54.** A Hall-effect probe operates with a 120-mA current. When the probe is placed in a uniform magnetic field of magnitude 0.080 0 T, it produces a Hall voltage of $0.700 \mu\text{V}$. (a) When it is used to measure an unknown magnetic field, the Hall voltage is $0.330 \mu\text{V}$. What is the magnitude of the unknown field? (b) The thickness of the probe in the direction of \vec{B} is 2.00 mm. Find the density of the charge carriers, each of which has charge of magnitude e .

- 55.** In an experiment designed to measure the Earth's **M** magnetic field using the Hall effect, a copper bar 0.500 cm thick is positioned along an east–west direction. Assume $n = 8.46 \times 10^{28}$ electrons/m³ and the plane of the bar is rotated to be perpendicular to the direction of \vec{B} . If a current of 8.00 A in the conductor results in a Hall voltage of 5.10×10^{-12} V, what is the magnitude of the Earth's magnetic field at this location?

Additional Problems

- 56.** Carbon-14 and carbon-12 ions (each with charge of magnitude e) are accelerated in a cyclotron. If the cyclotron has a magnetic field of magnitude 2.40 T, what is the difference in cyclotron frequencies for the two ions?
- 57.** In Niels Bohr's 1913 model of the hydrogen atom, the single electron is in a circular orbit of radius 5.29×10^{-11} m and its speed is 2.19×10^6 m/s. (a) What is the magnitude of the magnetic moment due to the electron's motion? (b) If the electron moves in a horizontal circle, counterclockwise as seen from above, what is the direction of this magnetic moment vector?

- 58.** Heart–lung machines and artificial kidney machines employ electromagnetic blood pumps. The blood is confined to an electrically insulating tube, cylindrical in practice but represented here for simplicity as a rectangle of interior width w and height h . Figure P29.58 shows a rectangular section of blood within the tube. Two electrodes fit into the top and the bottom of the tube. The potential difference between them establishes an electric current through the blood, with current density J over the section of length L shown in Figure P29.58. A perpendicular magnetic field exists in the same region. (a) Explain why this arrangement produces on the liquid a force that is directed along the length of the

pipe. (b) Show that the section of liquid in the magnetic field experiences a pressure increase JLB . (c) After the blood leaves the pump, is it charged? (d) Is it carrying current? (e) Is it magnetized? (The same electromagnetic pump can be used for any fluid that conducts electricity, such as liquid sodium in a nuclear reactor.)

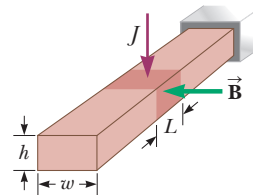


Figure P29.58

- 59.** A particle with positive charge $q = 3.20 \times 10^{-19}$ C **M** moves with a velocity $\vec{v} = (2\hat{i} + 3\hat{j} - \hat{k})$ m/s through a region where both a uniform magnetic field and a uniform electric field exist. (a) Calculate the total force on the moving particle (in unit-vector notation), taking $\vec{B} = (2\hat{i} + 4\hat{j} + \hat{k})$ T and $\vec{E} = (4\hat{i} - \hat{j} - 2\hat{k})$ V/m. (b) What angle does the force vector make with the positive x axis?

- 60.** Figure 29.11 shows a charged particle traveling in a nonuniform magnetic field forming a magnetic bottle. (a) Explain why the positively charged particle in the figure must be moving clockwise when viewed from the right of the figure. The particle travels along a helix whose radius decreases and whose pitch decreases as the particle moves into a stronger magnetic field. If the particle is moving to the right along the x axis, its velocity in this direction will be reduced to zero and it will be reflected from the right-hand side of the bottle, acting as a “magnetic mirror.” The particle ends up bouncing back and forth between the ends of the bottle. (b) Explain qualitatively why the axial velocity is reduced to zero as the particle moves into the region of strong magnetic field at the end of the bottle. (c) Explain why the tangential velocity increases as the particle approaches the end of the bottle. (d) Explain why the orbiting particle has a magnetic dipole moment.

- 61. Review.** The upper portion of the circuit in Figure **AMT** P29.61 is fixed. The horizontal wire at the bottom has a mass of 10.0 g and is 5.00 cm long. This wire hangs in the gravitational field of the Earth from identical light springs connected to the upper portion of the circuit. The springs stretch 0.500 cm under the weight of the

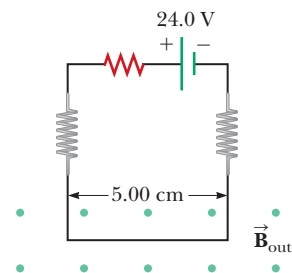


Figure P29.61

wire, and the circuit has a total resistance of $12.0\ \Omega$. When a magnetic field is turned on, directed out of the page, the springs stretch an additional $0.300\ \text{cm}$. Only the horizontal wire at the bottom of the circuit is in the magnetic field. What is the magnitude of the magnetic field?

62. Within a cylindrical region of space of radius $100\ \text{Mm}$, a magnetic field is uniform with a magnitude $25.0\ \mu\text{T}$ and oriented parallel to the axis of the cylinder. The magnetic field is zero outside this cylinder. A cosmic-ray proton traveling at one-tenth the speed of light is heading directly toward the center of the cylinder, moving perpendicular to the cylinder's axis. (a) Find the radius of curvature of the path the proton follows when it enters the region of the field. (b) Explain whether the proton will arrive at the center of the cylinder.
63. **Review.** A proton is at rest at the plane boundary of a region containing a uniform magnetic field B (Fig. P29.63). An alpha particle moving horizontally makes a head-on elastic collision with the proton. Immediately after the collision, both particles enter the magnetic field, moving perpendicular to the direction of the field. The radius of the proton's trajectory is R . The mass of the alpha particle is four times that of the proton, and its charge is twice that of the proton. Find the radius of the alpha particle's trajectory.

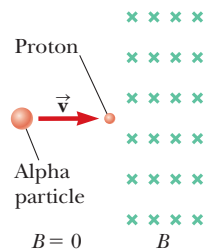


Figure P29.63

64. (a) A proton moving with velocity $\vec{v} = v_i\hat{i}$ experiences a magnetic force $\vec{F} = F_i\hat{j}$. Explain what you can and cannot infer about \vec{B} from this information. (b) **What If?** In terms of F_i , what would be the force on a proton in the same field moving with velocity $\vec{v} = -v_i\hat{i}$? (c) What would be the force on an electron in the same field moving with velocity $\vec{v} = -v_i\hat{i}$?
65. **Review.** A 0.200-kg metal rod carrying a current of $10.0\ \text{A}$ glides on two horizontal rails $0.500\ \text{m}$ apart. If the coefficient of kinetic friction between the rod and rails is 0.100 , what vertical magnetic field is required to keep the rod moving at a constant speed?
66. **Review.** A metal rod of mass m carrying a current I glides on two horizontal rails a distance d apart. If the coefficient of kinetic friction between the rod and rails is μ , what vertical magnetic field is required to keep the rod moving at a constant speed?
67. A proton having an initial velocity of $20.0\hat{i}\ \text{Mm/s}$ enters a uniform magnetic field of magnitude $0.300\ \text{T}$

with a direction perpendicular to the proton's velocity. It leaves the field-filled region with velocity $-20.0\hat{j}\ \text{Mm/s}$. Determine (a) the direction of the magnetic field, (b) the radius of curvature of the proton's path while in the field, (c) the distance the proton traveled in the field, and (d) the time interval during which the proton is in the field.

68. Model the electric motor in a handheld electric mixer as a single flat, compact, circular coil carrying electric current in a region where a magnetic field is produced by an external permanent magnet. You need consider only one instant in the operation of the motor. (We will consider motors again in Chapter 31.) Make order-of-magnitude estimates of (a) the magnetic field, (b) the torque on the coil, (c) the current in the coil, (d) the coil's area, and (e) the number of turns in the coil. The input power to the motor is electric, given by $P = I\Delta V$, and the useful output power is mechanical, $P = \tau\omega$.
69. **AMT** A nonconducting sphere has mass $80.0\ \text{g}$ and radius $20.0\ \text{cm}$. A flat, compact coil of wire with five turns is wrapped tightly around it, with each turn concentric with the sphere. The sphere is placed on an inclined plane that slopes downward to the left (Fig. P29.69), making an angle θ with the horizontal so that the coil is parallel to the inclined plane. A uniform magnetic field of $0.350\ \text{T}$ vertically upward exists in the region of the sphere. (a) What current in the coil will enable the sphere to rest in equilibrium on the inclined plane? (b) Show that the result does not depend on the value of θ .

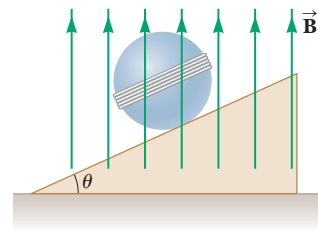


Figure P29.69

70. **Why is the following situation impossible?** Figure P29.70 shows an experimental technique for altering the direction of travel for a charged particle. A particle of charge $q = 1.00\ \mu\text{C}$ and mass $m = 2.00 \times 10^{-13}\ \text{kg}$ enters the bottom of the region of uniform magnetic field at speed $v = 2.00 \times 10^5\ \text{m/s}$, with a velocity vector

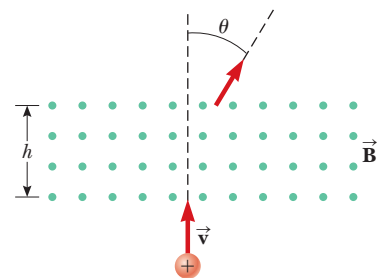


Figure P29.70

perpendicular to the field lines. The magnetic force on the particle causes its direction of travel to change so that it leaves the region of the magnetic field at the top traveling at an angle from its original direction. The magnetic field has magnitude $B = 0.400\text{ T}$ and is directed out of the page. The length h of the magnetic field region is 0.110 m . An experimenter performs the technique and measures the angle θ at which the particles exit the top of the field. She finds that the angles of deviation are exactly as predicted.

71. Figure P29.71 shows a schematic representation of an apparatus that can be used to measure magnetic fields. A rectangular coil of wire contains N turns and has a width w . The coil is attached to one arm of a balance and is suspended between the poles of a magnet. The magnetic field is uniform and perpendicular to the plane of the coil. The system is first balanced when the current in the coil is zero. When the switch is closed and the coil carries a current I , a mass m must be added to the right side to balance the system. (a) Find an expression for the magnitude of the magnetic field. (b) Why is the result independent of the vertical dimensions of the coil? (c) Suppose the coil has 50 turns and a width of 5.00 cm . When the switch is closed, the coil carries a current of 0.300 A , and a mass of 20.0 g must be added to the right side to balance the system. What is the magnitude of the magnetic field?

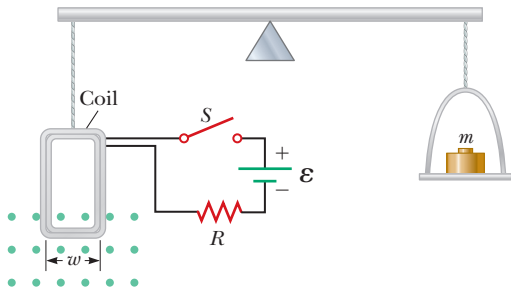


Figure P29.71

72. A heart surgeon monitors the flow rate of blood through an artery using an electromagnetic flowmeter (Fig. P29.72). Electrodes A and B make contact with the outer surface of the blood vessel, which has a diameter of 3.00 mm . (a) For a magnetic field magnitude of 0.0400 T , an emf of $160\text{ }\mu\text{V}$ appears between the electrodes. Calculate the speed of the blood. (b) Explain why electrode A has to be positive as shown. (c) Does the sign of the emf depend on whether the mobile ions in the blood are predominantly positively or negatively charged? Explain.

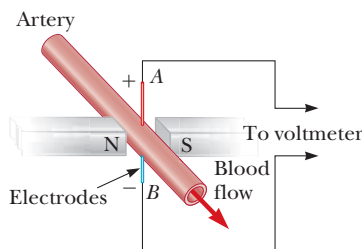


Figure P29.72

73. A uniform magnetic field of magnitude 0.150 T is directed along the positive x axis. A positron moving at a speed of $5.00 \times 10^6\text{ m/s}$ enters the field along a direction that makes an angle of $\theta = 85.0^\circ$ with the x axis (Fig. P29.73). The motion of the particle is expected to be a helix as described in Section 29.2. Calculate (a) the pitch p and (b) the radius r of the trajectory as defined in Figure P29.73.

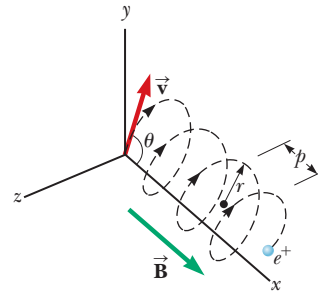


Figure P29.73

74. **Review.** (a) Show that a magnetic dipole in a uniform magnetic field, displaced from its equilibrium orientation and released, can oscillate as a torsional pendulum (Section 15.5) in simple harmonic motion. (b) Is this statement true for all angular displacements, for all displacements less than 180° , or only for small angular displacements? Explain. (c) Assume the dipole is a compass needle—a light bar magnet—with a magnetic moment of magnitude μ . It has moment of inertia I about its center, where it is mounted on a frictionless, vertical axle, and it is placed in a horizontal magnetic field of magnitude B . Determine its frequency of oscillation. (d) Explain how the compass needle can be conveniently used as an indicator of the magnitude of the external magnetic field. (e) If its frequency is 0.680 Hz in the Earth's local field, with a horizontal component of $39.2\text{ }\mu\text{T}$, what is the magnitude of a field parallel to the needle in which its frequency of oscillation is 4.90 Hz ?
75. The accompanying table shows measurements of the Hall voltage and corresponding magnetic field for a probe used to measure magnetic fields. (a) Plot these data and deduce a relationship between the two variables. (b) If the measurements were taken with a current of 0.200 A and the sample is made from a material having a charge-carrier density of $1.00 \times 10^{26}\text{ carriers/m}^3$, what is the thickness of the sample?

ΔV_H (μV)	B (T)
0	0.00
11	0.10
19	0.20
28	0.30
42	0.40
50	0.50
61	0.60
68	0.70
79	0.80
90	0.90
102	1.00

76. A metal rod having a mass per unit length λ carries a current I . The rod hangs from two wires in a uniform vertical magnetic field as shown in Figure P29.76. The wires make an angle θ with the vertical when in equilibrium. Determine the magnitude of the magnetic field.

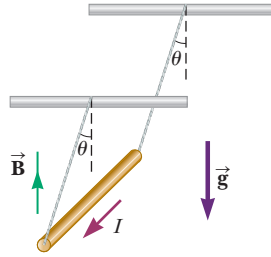


Figure P29.76

Challenge Problems

77. Consider an electron orbiting a proton and maintained in a fixed circular path of radius $R = 5.29 \times 10^{-11}$ m by the Coulomb force. Treat the orbiting particle as a current loop. Calculate the resulting torque when the electron-proton system is placed in a magnetic field of 0.400 T directed perpendicular to the magnetic moment of the loop.
78. Protons having a kinetic energy of 5.00 MeV ($1 \text{ eV} = 1.60 \times 10^{-19}$ J) are moving in the positive x direction and enter a magnetic field $\vec{B} = 0.050 \text{ 0k T}$ directed out of the plane of the page and extending from $x = 0$ to $x = 1.00$ m as shown in Figure P29.78. (a) Ignoring relativistic effects, find the angle α between the initial velocity vector of the proton beam and the velocity vector after the beam emerges from the field. (b) Calculate the y component of the protons' momenta as they leave the magnetic field.

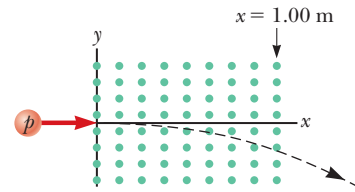


Figure P29.78

79. **Review.** A wire having a linear mass density of 1.00 g/cm is placed on a horizontal surface that has a coefficient of kinetic friction of 0.200. The wire carries a current of 1.50 A toward the east and slides horizontally to the north at constant velocity. What are (a) the magnitude and (b) the direction of the smallest magnetic field that enables the wire to move in this fashion?
80. A proton moving in the plane of the page has a kinetic energy of 6.00 MeV. A magnetic field of magnitude $B = 1.00$ T is directed into the page. The proton enters the magnetic field with its velocity vector at an angle $\theta = 45.0^\circ$ to the linear boundary of the field as shown in Figure P29.80. (a) Find x , the distance from the point of entry to where the proton will leave the field. (b) Determine θ' , the angle between the boundary and the proton's velocity vector as it leaves the field.

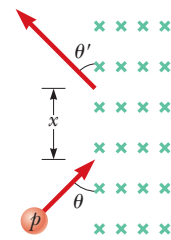


Figure P29.80

Sources of the
Magnetic Field

- 30.1 The Biot–Savart Law
- 30.2 The Magnetic Force Between Two Parallel Conductors
- 30.3 Ampère's Law
- 30.4 The Magnetic Field of a Solenoid
- 30.5 Gauss's Law in Magnetism
- 30.6 Magnetism in Matter



A cardiac catheterization laboratory stands ready to receive a patient suffering from atrial fibrillation. The large white objects on either side of the operating table are strong magnets that place the patient in a magnetic field. The electrophysiologist performing a catheter ablation procedure sits at a computer in the room to the left. With guidance from the magnetic field, he or she uses a joystick and other controls to thread the magnetically sensitive tip of a cardiac catheter through blood vessels and into the chambers of the heart. (©Courtesy of Stereotaxis, Inc.)

In Chapter 29, we discussed the magnetic force exerted on a charged particle moving in a magnetic field. To complete the description of the magnetic interaction, this chapter explores the origin of the magnetic field, moving charges. We begin by showing how to use the law of Biot and Savart to calculate the magnetic field produced at some point in space by a small current element. This formalism is then used to calculate the total magnetic field due to various current distributions. Next, we show how to determine the force between two current-carrying conductors, leading to the definition of the ampere. We also introduce Ampère's law, which is useful in calculating the magnetic field of a highly symmetric configuration carrying a steady current.

This chapter is also concerned with the complex processes that occur in magnetic materials. All magnetic effects in matter can be explained on the basis of atomic magnetic moments, which arise both from the orbital motion of electrons and from an intrinsic property of electrons known as spin.

30.1 The Biot–Savart Law

Shortly after Oersted's discovery in 1819 that a compass needle is deflected by a current-carrying conductor, Jean-Baptiste Biot (1774–1862) and Félix Savart (1791–1841) performed quantitative experiments on the force exerted by an electric current on a nearby magnet. From their experimental results, Biot and Savart arrived at a mathematical expression that gives the magnetic field at some point in space

in terms of the current that produces the field. That expression is based on the following experimental observations for the magnetic field $d\vec{\mathbf{B}}$ at a point P associated with a length element $d\vec{\mathbf{s}}$ of a wire carrying a steady current I (Fig. 30.1):

- The vector $d\vec{\mathbf{B}}$ is perpendicular both to $d\vec{\mathbf{s}}$ (which points in the direction of the current) and to the unit vector $\hat{\mathbf{r}}$ directed from $d\vec{\mathbf{s}}$ toward P .
- The magnitude of $d\vec{\mathbf{B}}$ is inversely proportional to r^2 , where r is the distance from $d\vec{\mathbf{s}}$ to P .
- The magnitude of $d\vec{\mathbf{B}}$ is proportional to the current I and to the magnitude ds of the length element $d\vec{\mathbf{s}}$.
- The magnitude of $d\vec{\mathbf{B}}$ is proportional to $\sin \theta$, where θ is the angle between the vectors $d\vec{\mathbf{s}}$ and $\hat{\mathbf{r}}$.

These observations are summarized in the mathematical expression known today as the **Biot–Savart law**:

$$d\vec{\mathbf{B}} = \frac{\mu_0}{4\pi} \frac{I d\vec{\mathbf{s}} \times \hat{\mathbf{r}}}{r^2} \quad (30.1)$$

where μ_0 is a constant called the **permeability of free space**:

$$\mu_0 = 4\pi \times 10^{-7} \text{ T} \cdot \text{m/A} \quad (30.2)$$

Notice that the field $d\vec{\mathbf{B}}$ in Equation 30.1 is the field created at a point by the current in only a small length element $d\vec{\mathbf{s}}$ of the conductor. To find the *total* magnetic field $\vec{\mathbf{B}}$ created at some point by a current of finite size, we must sum up contributions from all current elements $I d\vec{\mathbf{s}}$ that make up the current. That is, we must evaluate $\vec{\mathbf{B}}$ by integrating Equation 30.1:

$$\vec{\mathbf{B}} = \frac{\mu_0 I}{4\pi} \int \frac{d\vec{\mathbf{s}} \times \hat{\mathbf{r}}}{r^2} \quad (30.3)$$

where the integral is taken over the entire current distribution. This expression must be handled with special care because the integrand is a cross product and therefore a vector quantity. We shall see one case of such an integration in Example 30.1.

Although the Biot–Savart law was discussed for a current-carrying wire, it is also valid for a current consisting of charges flowing through space such as the particle beam in an accelerator. In that case, $d\vec{\mathbf{s}}$ represents the length of a small segment of space in which the charges flow.

Interesting similarities and differences exist between Equation 30.1 for the magnetic field due to a current element and Equation 23.9 for the electric field due to a point charge. The magnitude of the magnetic field varies as the inverse square of the distance from the source, as does the electric field due to a point charge. The directions of the two fields are quite different, however. The electric field created by a point charge is radial, but the magnetic field created by a current element is perpendicular to both the length element $d\vec{\mathbf{s}}$ and the unit vector $\hat{\mathbf{r}}$ as described by the cross product in Equation 30.1. Hence, if the conductor lies in the plane of the page as shown in Figure 30.1, $d\vec{\mathbf{B}}$ points out of the page at P and into the page at P' .

Another difference between electric and magnetic fields is related to the source of the field. An electric field is established by an isolated electric charge. The Biot–Savart law gives the magnetic field of an isolated current element at some point, but such an isolated current element cannot exist the way an isolated electric charge can. A current element *must* be part of an extended current distribution because a complete circuit is needed for charges to flow. Therefore,

Pitfall Prevention 30.1

The Biot–Savart Law The magnetic field described by the Biot–Savart law is the field *due to* a given current-carrying conductor. Do not confuse this field with any *external* field that may be applied to the conductor from some other source.

◀ Biot–Savart law

◀ Permeability of free space

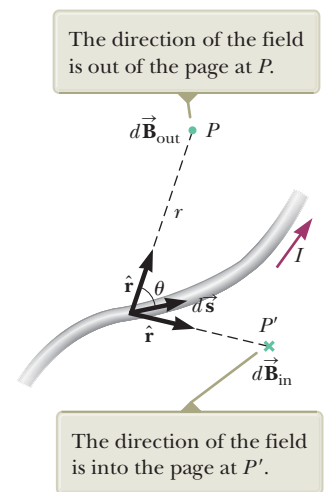


Figure 30.1 The magnetic field $d\vec{\mathbf{B}}$ at a point due to the current I through a length element $d\vec{\mathbf{s}}$ is given by the Biot–Savart law.

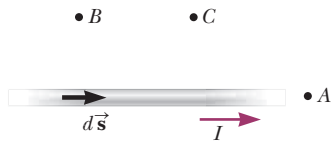


Figure 30.2 (Quick Quiz 30.1) Where is the magnetic field due to the current element the greatest?

the Biot–Savart law (Eq. 30.1) is only the first step in a calculation of a magnetic field; it must be followed by an integration over the current distribution as in Equation 30.3.

Quick Quiz 30.1 Consider the magnetic field due to the current in the wire shown in Figure 30.2. Rank the points A, B, and C in terms of magnitude of the magnetic field that is due to the current in just the length element $d\vec{s}$ shown from greatest to least.

Example 30.1 Magnetic Field Surrounding a Thin, Straight Conductor

Consider a thin, straight wire of finite length carrying a constant current I and placed along the x axis as shown in Figure 30.3. Determine the magnitude and direction of the magnetic field at point P due to this current.

SOLUTION

Conceptualize From the Biot–Savart law, we expect that the magnitude of the field is proportional to the current in the wire and decreases as the distance a from the wire to point P increases. We also expect the field to depend on the angles θ_1 and θ_2 in Figure 30.3b. We place the origin at O and let point P be along the positive y axis, with $\hat{\mathbf{k}}$ being a unit vector pointing out of the page.

Categorize We are asked to find the magnetic field due to a simple current distribution, so this example is a typical problem for which the Biot–Savart law is appropriate. We must find the field contribution from a small element of current and then integrate over the current distribution.

Analyze Let's start by considering a length element $d\vec{s}$ located a distance r from P . The direction of the magnetic field at point P due to the current in this element is out of the page because $d\vec{s} \times \hat{\mathbf{r}}$ is out of the page. In fact, because *all* the current elements $I d\vec{s}$ lie in the plane of the page, they all produce a magnetic field directed out of the page at point P . Therefore, the direction of the magnetic field at point P is out of the page and we need only find the magnitude of the field.

Evaluate the cross product in the Biot–Savart law:

$$d\vec{s} \times \hat{\mathbf{r}} = |d\vec{s} \times \hat{\mathbf{r}}| \hat{\mathbf{k}} = \left[dx \sin \left(\frac{\pi}{2} - \theta \right) \right] \hat{\mathbf{k}} = (dx \cos \theta) \hat{\mathbf{k}}$$

Substitute into Equation 30.1:

$$(1) \quad d\vec{\mathbf{B}} = (dB) \hat{\mathbf{k}} = \frac{\mu_0 I}{4\pi} \frac{dx \cos \theta}{r^2} \hat{\mathbf{k}}$$

From the geometry in Figure 30.3a, express r in terms of θ :

$$(2) \quad r = \frac{a}{\cos \theta}$$

Notice that $\tan \theta = -x/a$ from the right triangle in Figure 30.3a (the negative sign is necessary because $d\vec{s}$ is located at a negative value of x) and solve for x :

$$x = -a \tan \theta$$

Find the differential dx :

$$(3) \quad dx = -a \sec^2 \theta \, d\theta = -\frac{a \, d\theta}{\cos^2 \theta}$$

Substitute Equations (2) and (3) into the expression for the z component of the field from Equation (1):

$$(4) \quad dB = -\frac{\mu_0 I}{4\pi} \left(\frac{a \, d\theta}{\cos^2 \theta} \right) \left(\frac{\cos^2 \theta}{a^2} \right) \cos \theta = -\frac{\mu_0 I}{4\pi a} \cos \theta \, d\theta$$

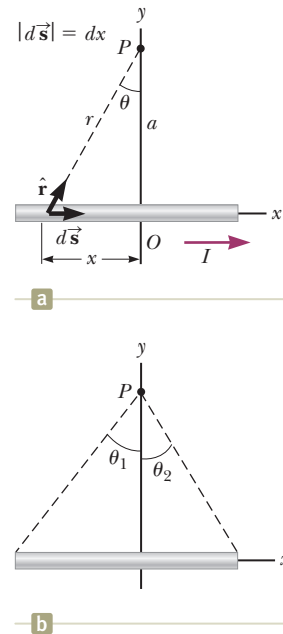


Figure 30.3 (Example 30.1) (a) A thin, straight wire carrying a current I . (b) The angles θ_1 and θ_2 used for determining the net field.

30.1 continued

Integrate Equation (4) over all length elements on the wire, where the subtending angles range from θ_1 to θ_2 as defined in Figure 30.3b:

$$B = -\frac{\mu_0 I}{4\pi a} \int_{\theta_1}^{\theta_2} \cos \theta \, d\theta = \frac{\mu_0 I}{4\pi a} (\sin \theta_1 - \sin \theta_2) \quad (30.4)$$

Finalize We can use this result to find the magnitude of the magnetic field of *any* straight current-carrying wire if we know the geometry and hence the angles θ_1 and θ_2 . Consider the special case of an infinitely long, straight wire. If the wire in Figure 30.3b becomes infinitely long, we see that $\theta_1 = \pi/2$ and $\theta_2 = -\pi/2$ for length elements ranging between positions $x = -\infty$ and $x = +\infty$. Because $(\sin \theta_1 - \sin \theta_2) = [\sin \pi/2 - \sin (-\pi/2)] = 2$, Equation 30.4 becomes

$$B = \frac{\mu_0 I}{2\pi a} \quad (30.5)$$

Equations 30.4 and 30.5 both show that the magnitude of the magnetic field is proportional to the current and decreases with increasing distance from the wire, as expected. Equation 30.5 has the same mathematical form as the expression for the magnitude of the electric field due to a long charged wire (see Eq. 24.7).

Example 30.2 Magnetic Field Due to a Curved Wire Segment

Calculate the magnetic field at point O for the current-carrying wire segment shown in Figure 30.4. The wire consists of two straight portions and a circular arc of radius a , which subtends an angle θ .

SOLUTION

Conceptualize The magnetic field at O due to the current in the straight segments AA' and CC' is zero because $d\vec{s}$ is parallel to \hat{r} along these paths, which means that $d\vec{s} \times \hat{r} = 0$ for these paths. Therefore, we expect the magnetic field at O to be due only to the current in the curved portion of the wire.

Categorize Because we can ignore segments AA' and CC' , this example is categorized as an application of the Biot–Savart law to the curved wire segment AC .

Analyze Each length element $d\vec{s}$ along path AC is at the same distance a from O , and the current in each contributes a field element $d\vec{B}$ directed into the page at O . Furthermore, at every point on AC , $d\vec{s}$ is perpendicular to \hat{r} ; hence, $|d\vec{s} \times \hat{r}| = ds$.

From Equation 30.1, find the magnitude of the field at O due to the current in an element of length ds :

$$dB = \frac{\mu_0}{4\pi} \frac{I ds}{a^2}$$

Integrate this expression over the curved path AC , noting that I and a are constants:

$$B = \frac{\mu_0 I}{4\pi a^2} \int ds = \frac{\mu_0 I}{4\pi a^2} s$$

From the geometry, note that $s = a\theta$ and substitute:

$$B = \frac{\mu_0 I}{4\pi a^2} (a\theta) = \frac{\mu_0 I}{4\pi a} \theta \quad (30.6)$$

Finalize Equation 30.6 gives the magnitude of the magnetic field at O . The direction of \vec{B} is into the page at O because $d\vec{s} \times \hat{r}$ is into the page for every length element.

WHAT IF? What if you were asked to find the magnetic field at the center of a circular wire loop of radius R that carries a current I ? Can this question be answered at this point in our understanding of the source of magnetic fields?

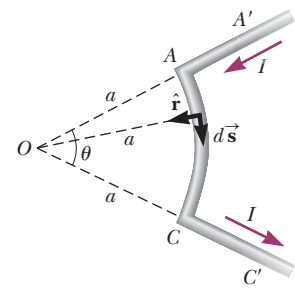


Figure 30.4 (Example 30.2) The length of the curved segment AC is s .

continued

30.2 continued

Answer Yes, it can. The straight wires in Figure 30.4 do not contribute to the magnetic field. The only contribution is from the curved segment. As the angle θ increases, the curved segment becomes a full circle when $\theta = 2\pi$. Therefore, you can find the magnetic field at the center of a wire loop by letting $\theta = 2\pi$ in Equation 30.6:

$$B = \frac{\mu_0 I}{4\pi a} 2\pi = \frac{\mu_0 I}{2a}$$

This result is a limiting case of a more general result discussed in Example 30.3.

Example 30.3 Magnetic Field on the Axis of a Circular Current Loop

Consider a circular wire loop of radius a located in the yz plane and carrying a steady current I as in Figure 30.5. Calculate the magnetic field at an axial point P a distance x from the center of the loop.

SOLUTION

Conceptualize Compare this problem to Example 23.8 for the electric field due to a ring of charge. Figure 30.5 shows the magnetic field contribution $d\vec{B}$ at P due to a single current element at the top of the ring. This field vector can be resolved into components dB_x parallel to the axis of the ring and dB_\perp perpendicular to the axis. Think about the magnetic field contributions from a current element at the bottom of the loop. Because of the symmetry of the situation, the perpendicular components of the field due to elements at the top and bottom of the ring cancel. This cancellation occurs for all pairs of segments around the ring, so we can ignore the perpendicular component of the field and focus solely on the parallel components, which simply add.

Categorize We are asked to find the magnetic field due to a simple current distribution, so this example is a typical problem for which the Biot–Savart law is appropriate.

Analyze In this situation, every length element $d\vec{s}$ is perpendicular to the vector \hat{r} at the location of the element. Therefore, for any element, $|d\vec{s} \times \hat{r}| = (ds)(1) \sin 90^\circ = ds$. Furthermore, all length elements around the loop are at the same distance r from P , where $r^2 = a^2 + x^2$.

Use Equation 30.1 to find the magnitude of $d\vec{B}$ due to the current in any length element $d\vec{s}$:

$$dB = \frac{\mu_0 I}{4\pi} \frac{|d\vec{s} \times \hat{r}|}{r^2} = \frac{\mu_0 I}{4\pi} \frac{ds}{(a^2 + x^2)}$$

Find the x component of the field element:

$$dB_x = \frac{\mu_0 I}{4\pi} \frac{ds}{(a^2 + x^2)} \cos \theta$$

Integrate over the entire loop:

$$B_x = \oint dB_x = \frac{\mu_0 I}{4\pi} \oint \frac{ds \cos \theta}{a^2 + x^2}$$

From the geometry, evaluate $\cos \theta$:

$$\cos \theta = \frac{a}{(a^2 + x^2)^{1/2}}$$

Substitute this expression for $\cos \theta$ into the integral and note that x and a are both constant:

$$B_x = \frac{\mu_0 I}{4\pi} \oint \frac{ds}{a^2 + x^2} \left[\frac{a}{(a^2 + x^2)^{1/2}} \right] = \frac{\mu_0 I}{4\pi} \frac{a}{(a^2 + x^2)^{3/2}} \oint ds$$

Integrate around the loop:

$$B_x = \frac{\mu_0 I}{4\pi} \frac{a}{(a^2 + x^2)^{3/2}} (2\pi a) = \frac{\mu_0 I a^2}{2(a^2 + x^2)^{3/2}} \quad (30.7)$$

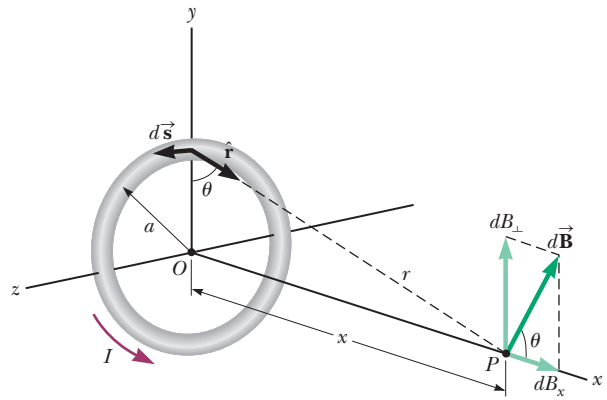


Figure 30.5 (Example 30.3) Geometry for calculating the magnetic field at a point P lying on the axis of a current loop. By symmetry, the total field \vec{B} is along this axis.

30.3 continued

Finalize To find the magnetic field at the center of the loop, set $x = 0$ in Equation 30.7. At this special point,

$$B = \frac{\mu_0 I}{2a} \quad (\text{at } x = 0) \quad (30.8)$$

which is consistent with the result of the **What If?** feature of Example 30.2.

The pattern of magnetic field lines for a circular current loop is shown in Figure 30.6a. For clarity, the lines are drawn for only the plane that contains the axis of the loop. The field-line pattern is axially symmetric and looks like the pattern around a bar magnet, which is shown in Figure 30.6b.

WHAT IF? What if we consider points on the x axis very far from the loop? How does the magnetic field behave at these distant points?

Answer In this case, in which $x \gg a$, we can neglect the term a^2 in the denominator of Equation 30.7 and obtain

$$B \approx \frac{\mu_0 I a^2}{2x^3} \quad (\text{for } x \gg a) \quad (30.9)$$

The magnitude of the magnetic moment μ of the loop is defined as the product of current and loop area (see Eq. 29.15): $\mu = I(\pi a^2)$ for our circular loop. We can express Equation 30.9 as

$$B \approx \frac{\mu_0}{2\pi} \frac{\mu}{x^3} \quad (30.10)$$

This result is similar in form to the expression for the electric field due to an electric dipole, $E = k_e(p/y^3)$ (see Example 23.6), where $p = 2aq$ is the electric dipole moment as defined in Equation 26.16.

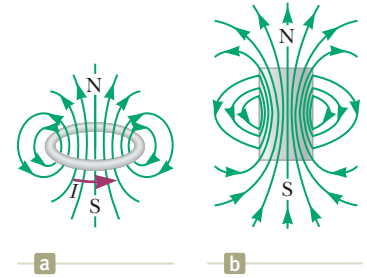


Figure 30.6 (Example 30.3) (a) Magnetic field lines surrounding a current loop. (b) Magnetic field lines surrounding a bar magnet. Notice the similarity between this line pattern and that of a current loop.

30.2 The Magnetic Force Between Two Parallel Conductors

In Chapter 29, we described the magnetic force that acts on a current-carrying conductor placed in an external magnetic field. Because a current in a conductor sets up its own magnetic field, it is easy to understand that two current-carrying conductors exert magnetic forces on each other. One wire establishes the magnetic field and the other wire is modeled as a collection of particles in a magnetic field. Such forces between wires can be used as the basis for defining the ampere and the coulomb.

Consider two long, straight, parallel wires separated by a distance a and carrying currents I_1 and I_2 in the same direction as in Figure 30.7. Let's determine the force exerted on one wire due to the magnetic field set up by the other wire. Wire 2, which carries a current I_2 and is identified arbitrarily as the source wire, creates a magnetic field \vec{B}_2 at the location of wire 1, the test wire. The magnitude of this magnetic field is the same at all points on wire 1. The direction of \vec{B}_2 is perpendicular to wire 1 as shown in Figure 30.7. According to Equation 29.10, the magnetic force on a length ℓ of wire 1 is $\vec{F}_1 = I_1 \vec{\ell} \times \vec{B}_2$. Because $\vec{\ell}$ is perpendicular to \vec{B}_2 in this situation, the magnitude of \vec{F}_1 is $F_1 = I_1 \ell B_2$. Because the magnitude of \vec{B}_2 is given by Equation 30.5,

$$F_1 = I_1 \ell B_2 = I_1 \ell \left(\frac{\mu_0 I_2}{2\pi a} \right) = \frac{\mu_0 I_1 I_2}{2\pi a} \ell \quad (30.11)$$

The direction of \vec{F}_1 is toward wire 2 because $\vec{\ell} \times \vec{B}_2$ is in that direction. When the field set up at wire 2 by wire 1 is calculated, the force \vec{F}_2 acting on wire 2 is found to be equal in magnitude and opposite in direction to \vec{F}_1 , which is what we expect because Newton's third law must be obeyed. When the currents are in opposite directions (that is, when one of the currents is reversed in Fig. 30.7), the forces

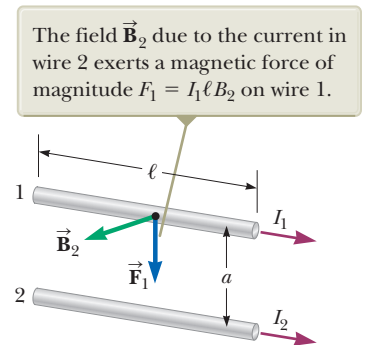


Figure 30.7 Two parallel wires that each carry a steady current exert a magnetic force on each other. The force is attractive if the currents are parallel (as shown) and repulsive if the currents are antiparallel.

are reversed and the wires repel each other. Hence, parallel conductors carrying currents in the *same* direction *attract* each other, and parallel conductors carrying currents in *opposite* directions *repel* each other.

Because the magnitudes of the forces are the same on both wires, we denote the magnitude of the magnetic force between the wires as simply F_B . We can rewrite this magnitude in terms of the force per unit length:

$$\frac{F_B}{\ell} = \frac{\mu_0 I_1 I_2}{2\pi a} \quad (30.12)$$

The force between two parallel wires is used to define the **ampere** as follows:

Definition of the ampere ▶

When the magnitude of the force per unit length between two long, parallel wires that carry identical currents and are separated by 1 m is 2×10^{-7} N/m, the current in each wire is defined to be 1 A.

The value 2×10^{-7} N/m is obtained from Equation 30.12 with $I_1 = I_2 = 1$ A and $a = 1$ m. Because this definition is based on a force, a mechanical measurement can be used to standardize the ampere. For instance, the National Institute of Standards and Technology uses an instrument called a *current balance* for primary current measurements. The results are then used to standardize other, more conventional instruments such as ammeters.

The SI unit of charge, the **coulomb**, is defined in terms of the ampere: When a conductor carries a steady current of 1 A, the quantity of charge that flows through a cross section of the conductor in 1 s is 1 C.

In deriving Equations 30.11 and 30.12, we assumed both wires are long compared with their separation distance. In fact, only one wire needs to be long. The equations accurately describe the forces exerted on each other by a long wire and a straight, parallel wire of limited length ℓ .

- Quick Quiz 30.2** A loose spiral spring carrying no current is hung from a ceiling. When a switch is thrown so that a current exists in the spring, do the coils
- (a) move closer together, (b) move farther apart, or (c) not move at all?

Example 30.4 Suspending a Wire **AM**

Two infinitely long, parallel wires are lying on the ground a distance $a = 1.00$ cm apart as shown in Figure 30.8a. A third wire, of length $L = 10.0$ m and mass 400 g, carries a current of $I_1 = 100$ A and is levitated above the first two wires, at a horizontal position midway between them. The infinitely long wires carry equal currents I_2 in the same direction, but in the direction opposite that in the levitated wire. What current must the infinitely long wires carry so that the three wires form an equilateral triangle?

SOLUTION

Conceptualize Because the current in the short wire is opposite those in the long wires, the short wire is repelled from both of the others. Imagine the currents in the long wires in Figure 30.8a are increased. The repulsive force becomes stronger, and the levitated wire rises to the point at which the wire is once again levitated in equilibrium at a higher position. Figure 30.8b shows the desired situation with the three wires forming an equilateral triangle.

Categorize Because the levitated wire is subject to forces but does not accelerate, it is modeled as a *particle in equilibrium*.

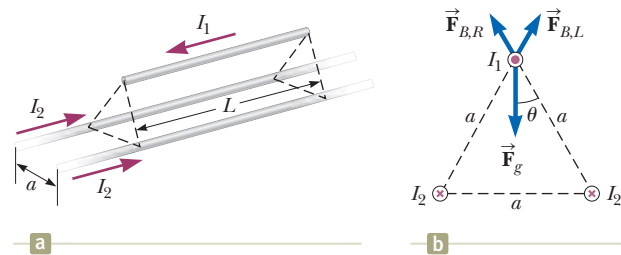


Figure 30.8 (Example 30.4) (a) Two current-carrying wires lie on the ground and suspend a third wire in the air by magnetic forces. (b) End view. In the situation described in the example, the three wires form an equilateral triangle. The two magnetic forces on the levitated wire are $\vec{F}_{B,L}$, the force due to the left-hand wire on the ground, and $\vec{F}_{B,R}$, the force due to the right-hand wire. The gravitational force \vec{F}_g on the levitated wire is also shown.

▶ 30.4 continued

Analyze The horizontal components of the magnetic forces on the levitated wire cancel. The vertical components are both positive and add together. Choose the z axis to be upward through the top wire in Figure 30.8b and in the plane of the page.

Find the total magnetic force in the upward direction on the levitated wire:

$$\vec{\mathbf{F}}_B = 2 \left(\frac{\mu_0 I_1 I_2}{2\pi a} \ell \right) \cos \theta \hat{\mathbf{k}} = \frac{\mu_0 I_1 I_2}{\pi a} \ell \cos \theta \hat{\mathbf{k}}$$

Find the gravitational force on the levitated wire:

$$\vec{\mathbf{F}}_g = -mg\hat{\mathbf{k}}$$

Apply the particle in equilibrium model by adding the forces and setting the net force equal to zero:

$$\sum \vec{\mathbf{F}} = \vec{\mathbf{F}}_B + \vec{\mathbf{F}}_g = \frac{\mu_0 I_1 I_2}{\pi a} \ell \cos \theta \hat{\mathbf{k}} - mg\hat{\mathbf{k}} = 0$$

Solve for the current in the wires on the ground:

$$I_2 = \frac{mg\pi a}{\mu_0 I_1 \ell \cos \theta}$$

Substitute numerical values:

$$\begin{aligned} I_2 &= \frac{(0.400 \text{ kg})(9.80 \text{ m/s}^2)\pi(0.010 \text{ m})}{(4\pi \times 10^{-7} \text{ T} \cdot \text{m/A})(100 \text{ A})(10.0 \text{ m}) \cos 30.0^\circ} \\ &= \mathbf{113 \text{ A}} \end{aligned}$$

Finalize The currents in all wires are on the order of 10^2 A. Such large currents would require specialized equipment. Therefore, this situation would be difficult to establish in practice. Is the equilibrium of wire 1 stable or unstable?

30.3 Ampère's Law

Looking back, we can see that the result of Example 30.1 is important because a current in the form of a long, straight wire occurs often. Figure 30.9 is a perspective view of the magnetic field surrounding a long, straight, current-carrying wire. Because of the wire's symmetry, the magnetic field lines are circles concentric with the wire and lie in planes perpendicular to the wire. The magnitude of $\vec{\mathbf{B}}$ is constant on any circle of radius a and is given by Equation 30.5. A convenient rule for determining the direction of $\vec{\mathbf{B}}$ is to grasp the wire with the right hand, positioning the thumb along the direction of the current. The four fingers wrap in the direction of the magnetic field.

Figure 30.9 also shows that the magnetic field line has no beginning and no end. Rather, it forms a closed loop. That is a major difference between magnetic field lines and electric field lines, which begin on positive charges and end on negative charges. We will explore this feature of magnetic field lines further in Section 30.5.

Oersted's 1819 discovery about deflected compass needles demonstrates that a current-carrying conductor produces a magnetic field. Figure 30.10a (page 912) shows how this effect can be demonstrated in the classroom. Several compass needles are placed in a horizontal plane near a long, vertical wire. When no current is present in the wire, all the needles point in the same direction (that of the horizontal component of the Earth's magnetic field) as expected. When the wire carries a strong, steady current, the needles all deflect in a direction tangent to the circle as in Figure 30.10b. These observations demonstrate that the direction of the magnetic field produced by the current in the wire is consistent with the right-hand rule described in Figure 30.9. When the current is reversed, the needles in Figure 30.10b also reverse.

Now let's evaluate the product $\vec{\mathbf{B}} \cdot d\vec{\mathbf{s}}$ for a small length element $d\vec{\mathbf{s}}$ on the circular path defined by the compass needles and sum the products for all elements

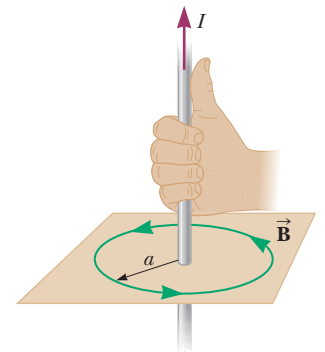


Figure 30.9 The right-hand rule for determining the direction of the magnetic field surrounding a long, straight wire carrying a current. Notice that the magnetic field lines form circles around the wire.



Andre-Marie Ampère
French Physicist (1775–1836)

Ampère is credited with the discovery of electromagnetism, which is the relationship between electric currents and magnetic fields. Ampère's genius, particularly in mathematics, became evident by the time he was 12 years old; his personal life, however, was filled with tragedy. His father, a wealthy city official, was guillotined during the French Revolution, and his wife died young, in 1803. Ampère died at the age of 61 of pneumonia.

Pitfall Prevention 30.2

Avoiding Problems with Signs

When using Ampère's law, apply the following right-hand rule. Point your thumb in the direction of the current through the amperian loop. Your curled fingers then point in the direction that you should integrate when traversing the loop to avoid having to define the current as negative.

Ampère's law ▶

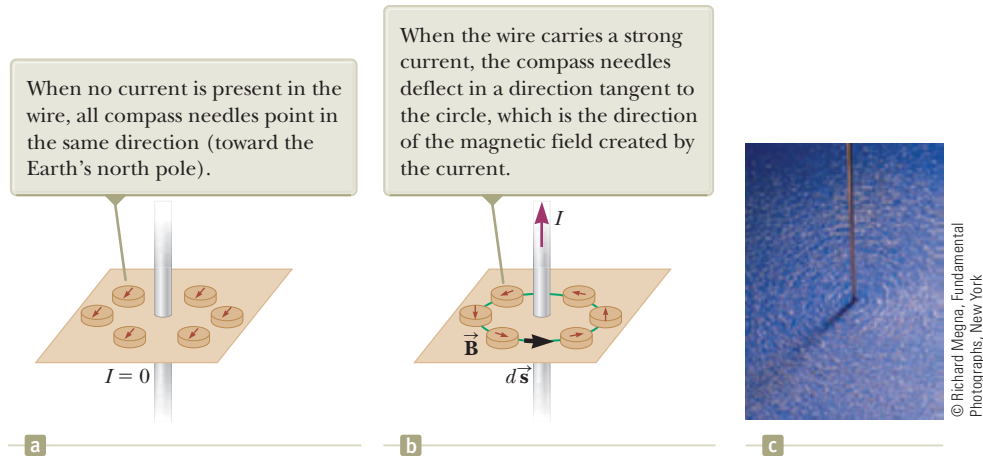


Figure 30.10 (a) and (b) Compasses show the effects of the current in a nearby wire. (c) Circular magnetic field lines surrounding a current-carrying conductor, displayed with iron filings.

over the closed circular path.¹ Along this path, the vectors $d\vec{s}$ and \vec{B} are parallel at each point (see Fig. 30.10b), so $\vec{B} \cdot d\vec{s} = B ds$. Furthermore, the magnitude of \vec{B} is constant on this circle and is given by Equation 30.5. Therefore, the sum of the products $B ds$ over the closed path, which is equivalent to the line integral of $\vec{B} \cdot d\vec{s}$, is

$$\oint \vec{B} \cdot d\vec{s} = B \oint ds = \frac{\mu_0 I}{2\pi r} (2\pi r) = \mu_0 I$$

where $\oint ds = 2\pi r$ is the circumference of the circular path of radius r . Although this result was calculated for the special case of a circular path surrounding a wire of infinite length, it holds for a closed path of *any* shape (an *amperian loop*) surrounding a current that exists in an unbroken circuit. The general case, known as **Ampère's law**, can be stated as follows:

The line integral of $\vec{B} \cdot d\vec{s}$ around any closed path equals $\mu_0 I$, where I is the total steady current passing through any surface bounded by the closed path:

$$\oint \vec{B} \cdot d\vec{s} = \mu_0 I \quad (30.13)$$

Ampère's law describes the creation of magnetic fields by all continuous current configurations, but at our mathematical level it is useful only for calculating the magnetic field of current configurations having a high degree of symmetry. Its use is similar to that of Gauss's law in calculating electric fields for highly symmetric charge distributions.

- Quick Quiz 30.3** Rank the magnitudes of $\oint \vec{B} \cdot d\vec{s}$ for the closed paths *a* through *d* in Figure 30.11 from greatest to least.

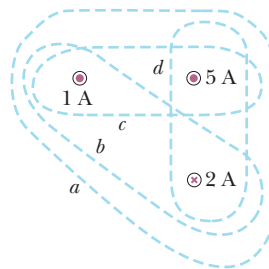


Figure 30.11 (Quick Quiz 30.3) Four closed paths around three current-carrying wires.

¹You may wonder why we would choose to evaluate this scalar product. The origin of Ampère's law is in 19th-century science, in which a "magnetic charge" (the supposed analog to an isolated electric charge) was imagined to be moved around a circular field line. The work done on the charge was related to $\vec{B} \cdot d\vec{s}$, just as the work done moving an electric charge in an electric field is related to $\vec{E} \cdot d\vec{s}$. Therefore, Ampère's law, a valid and useful principle, arose from an erroneous and abandoned work calculation!

- Quick Quiz 30.4** Rank the magnitudes of $\oint \vec{B} \cdot d\vec{s}$ for the closed paths *a* through *d* in Figure 30.12 from greatest to least.

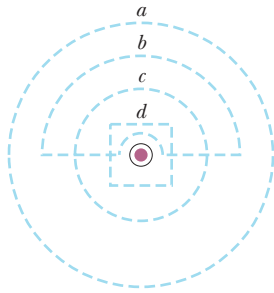


Figure 30.12 (Quick Quiz 30.4) Several closed paths near a single current-carrying wire.

Example 30.5 The Magnetic Field Created by a Long Current-Carrying Wire

A long, straight wire of radius R carries a steady current I that is uniformly distributed through the cross section of the wire (Fig. 30.13). Calculate the magnetic field a distance r from the center of the wire in the regions $r \geq R$ and $r < R$.

SOLUTION

Conceptualize Study Figure 30.13 to understand the structure of the wire and the current in the wire. The current creates magnetic fields everywhere, both inside and outside the wire. Based on our discussions about long, straight wires, we expect the magnetic field lines to be circles centered on the central axis of the wire.

Categorize Because the wire has a high degree of symmetry, we categorize this example as an Ampère's law problem. For the $r \geq R$ case, we should arrive at the same result as was obtained in Example 30.1, where we applied the Biot-Savart law to the same situation.

Analyze For the magnetic field exterior to the wire, let us choose for our path of integration circle 1 in Figure 30.13. From symmetry, \vec{B} must be constant in magnitude and parallel to $d\vec{s}$ at every point on this circle.

Note that the total current passing through the plane of the circle is I and apply Ampère's law:

$$\oint \vec{B} \cdot d\vec{s} = B \oint ds = B(2\pi r) = \mu_0 I$$

Solve for B :

$$B = \frac{\mu_0 I}{2\pi r} \quad (\text{for } r \geq R) \quad (30.14)$$

Now consider the interior of the wire, where $r < R$. Here the current I' passing through the plane of circle 2 is less than the total current I .

Set the ratio of the current I' enclosed by circle 2 to the entire current I equal to the ratio of the area πr^2 enclosed by circle 2 to the cross-sectional area πR^2 of the wire:

$$\frac{I'}{I} = \frac{\pi r^2}{\pi R^2}$$

Solve for I' :

$$I' = \frac{r^2}{R^2} I$$

Apply Ampère's law to circle 2:

$$\oint \vec{B} \cdot d\vec{s} = B(2\pi r) = \mu_0 I' = \mu_0 \left(\frac{r^2}{R^2} I \right)$$

Solve for B :

$$B = \left(\frac{\mu_0 I}{2\pi R^2} \right) r \quad (\text{for } r < R) \quad (30.15)$$

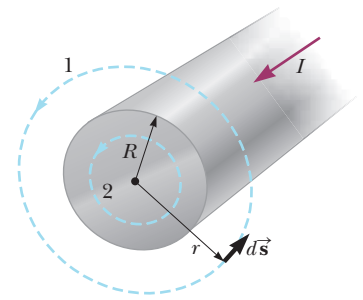


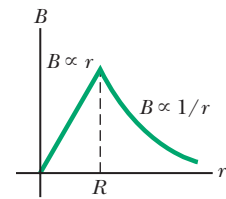
Figure 30.13 (Example 30.5) A long, straight wire of radius R carrying a steady current I uniformly distributed across the cross section of the wire. The magnetic field at any point can be calculated from Ampère's law using a circular path of radius r , concentric with the wire.

continued

30.5 continued

Finalize The magnetic field exterior to the wire is identical in form to Equation 30.5. As is often the case in highly symmetric situations, it is much easier to use Ampère's law than the Biot–Savart law (Example 30.1). The magnetic field interior to the wire is similar in form to the expression for the electric field inside a uniformly charged sphere (see Example 24.3). The magnitude of the magnetic field versus r for this configuration is plotted in Figure 30.14. Inside the wire, $B \rightarrow 0$ as $r \rightarrow 0$. Furthermore, Equations 30.14 and 30.15 give the same value of the magnetic field at $r = R$, demonstrating that the magnetic field is continuous at the surface of the wire.

Figure 30.14 (Example 30.5) Magnitude of the magnetic field versus r for the wire shown in Figure 30.13. The field is proportional to r inside the wire and varies as $1/r$ outside the wire.



Example 30.6 The Magnetic Field Created by a Toroid

A device called a *toroid* (Fig. 30.15) is often used to create an almost uniform magnetic field in some enclosed area. The device consists of a conducting wire wrapped around a ring (a *torus*) made of a nonconducting material. For a toroid having N closely spaced turns of wire, calculate the magnetic field in the region occupied by the torus, a distance r from the center.

SOLUTION

Conceptualize Study Figure 30.15 carefully to understand how the wire is wrapped around the torus. The torus could be a solid material or it could be air, with a stiff wire wrapped into the shape shown in Figure 30.15 to form an empty toroid. Imagine each turn of the wire to be a circular loop as in Example 30.3. The magnetic field at the center of the loop is perpendicular to the plane of the loop. Therefore, the magnetic field lines of the collection of loops will form circles within the toroid such as suggested by loop 1 in Figure 30.15.

Categorize Because the toroid has a high degree of symmetry, we categorize this example as an Ampère's law problem.

Analyze Consider the circular amperian loop (loop 1) of radius r in the plane of Figure 30.15. By symmetry, the magnitude of the field is constant on this circle and tangent to it, so $\vec{B} \cdot d\vec{s} = B ds$. Furthermore, the wire passes through the loop N times, so the total current through the loop is NI .

Apply Ampère's law to loop 1:

$$\oint \vec{B} \cdot d\vec{s} = B \oint ds = B(2\pi r) = \mu_0 NI$$

Solve for B :

$$B = \frac{\mu_0 NI}{2\pi r} \quad (30.16)$$

Finalize This result shows that B varies as $1/r$ and hence is *nonuniform* in the region occupied by the torus. If, however, r is very large compared with the cross-sectional radius a of the torus, the field is approximately uniform inside the torus.

For an ideal toroid, in which the turns are closely spaced, the external magnetic field is close to zero, but it is not exactly zero. In Figure 30.15, imagine the radius r

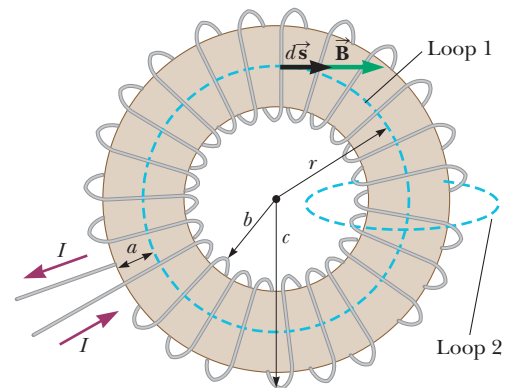


Figure 30.15 (Example 30.6) A toroid consisting of many turns of wire. If the turns are closely spaced, the magnetic field in the interior of the toroid is tangent to the dashed circle (loop 1) and varies as $1/r$. The field outside the toroid is very small and can be described by using the amperian loop (loop 2) at the right side, perpendicular to the page.

of amperian loop 1 to be either smaller than b or larger than c . In either case, the loop encloses zero net current, so $\oint \vec{B} \cdot d\vec{s} = 0$. You might think this result proves that $\vec{B} = 0$, but it does not. Consider the amperian loop (loop 2) on the right side of the toroid in Figure 30.15. The plane of this loop is perpendicular to the page, and the toroid passes through the loop. As charges enter the toroid as indicated by the current directions in Figure 30.15,

30.6 continued

they work their way counterclockwise around the toroid. Therefore, there is a counterclockwise current around the toroid, so that a current passes through amperian loop 2! This current is small, but not zero. As a result, the toroid

acts as a current loop and produces a weak external field of the form shown in Figure 30.6. The reason $\oint \vec{B} \cdot d\vec{s} = 0$ for amperian loop 1 of radius $r < b$ or $r > c$ is that the field lines are perpendicular to $d\vec{s}$, not because $\vec{B} = 0$.

30.4 The Magnetic Field of a Solenoid

A **solenoid** is a long wire wound in the form of a helix. With this configuration, a reasonably uniform magnetic field can be produced in the space surrounded by the turns of wire—which we shall call the *interior* of the solenoid—when the solenoid carries a current. When the turns are closely spaced, each can be approximated as a circular loop; the net magnetic field is the vector sum of the fields resulting from all the turns.

Figure 30.16 shows the magnetic field lines surrounding a loosely wound solenoid. The field lines in the interior are nearly parallel to one another, are uniformly distributed, and are close together, indicating that the field in this space is strong and almost uniform.

If the turns are closely spaced and the solenoid is of finite length, the external magnetic field lines are as shown in Figure 30.17a. This field line distribution is similar to that surrounding a bar magnet (Fig. 30.17b). Hence, one end of the solenoid behaves like the north pole of a magnet and the opposite end behaves like the south pole. As the length of the solenoid increases, the interior field becomes more uniform and the exterior field becomes weaker. An *ideal solenoid* is approached when the turns are closely spaced and the length is much greater than the radius of the turns. Figure 30.18 (page 916) shows a longitudinal cross section of part of such a solenoid carrying a current I . In this case, the external field is close to zero and the interior field is uniform over a great volume.

Consider the amperian loop (loop 1) perpendicular to the page in Figure 30.18 (page 916), surrounding the ideal solenoid. This loop encloses a small

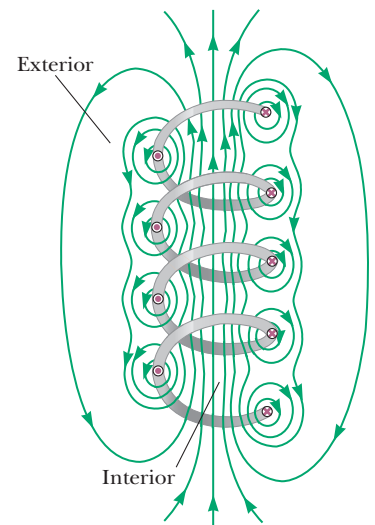


Figure 30.16 The magnetic field lines for a loosely wound solenoid.

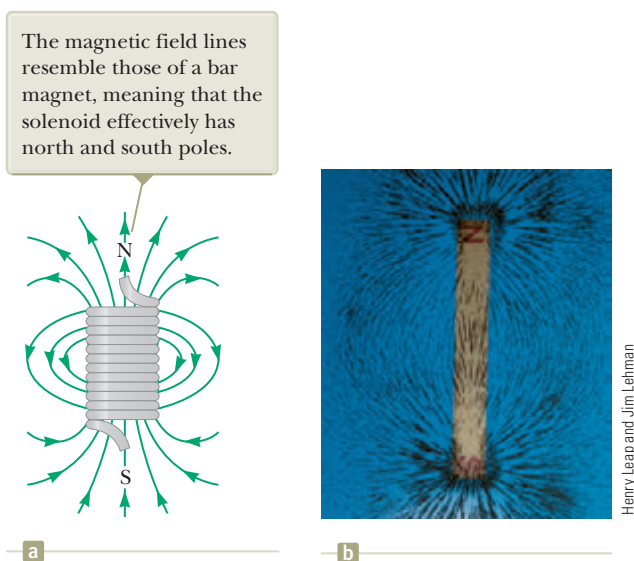


Figure 30.17 (a) Magnetic field lines for a tightly wound solenoid of finite length, carrying a steady current. The field in the interior space is strong and nearly uniform. (b) The magnetic field pattern of a bar magnet, displayed with small iron filings on a sheet of paper.

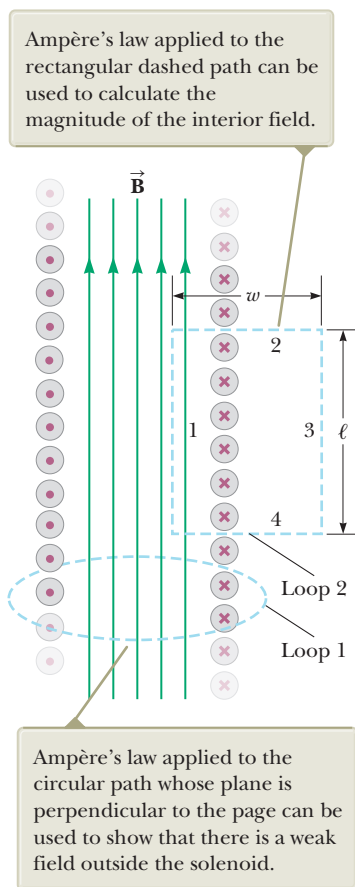


Figure 30.18 Cross-sectional view of an ideal solenoid, where the interior magnetic field is uniform and the exterior field is close to zero.

Magnetic field inside
a solenoid

current as the charges in the wire move coil by coil along the length of the solenoid. Therefore, there is a nonzero magnetic field outside the solenoid. It is a weak field, with circular field lines, like those due to a line of current as in Figure 30.9. For an ideal solenoid, this weak field is the only field external to the solenoid.

We can use Ampère's law to obtain a quantitative expression for the interior magnetic field in an ideal solenoid. Because the solenoid is ideal, \vec{B} in the interior space is uniform and parallel to the axis and the magnetic field lines in the exterior space form circles around the solenoid. The planes of these circles are perpendicular to the page. Consider the rectangular path (loop 2) of length ℓ and width w shown in Figure 30.18. Let's apply Ampère's law to this path by evaluating the integral of $\vec{B} \cdot d\vec{s}$ over each side of the rectangle. The contribution along side 3 is zero because the external magnetic field lines are perpendicular to the path in this region. The contributions from sides 2 and 4 are both zero, again because \vec{B} is perpendicular to $d\vec{s}$ along these paths, both inside and outside the solenoid. Side 1 gives a contribution to the integral because along this path \vec{B} is uniform and parallel to $d\vec{s}$. The integral over the closed rectangular path is therefore

$$\oint \vec{B} \cdot d\vec{s} = \int_{\text{path 1}} \vec{B} \cdot d\vec{s} = B \int ds = B\ell$$

The right side of Ampère's law involves the total current I through the area bounded by the path of integration. In this case, the total current through the rectangular path equals the current through each turn multiplied by the number of turns. If N is the number of turns in the length ℓ , the total current through the rectangle is NI . Therefore, Ampère's law applied to this path gives

$$\oint \vec{B} \cdot d\vec{s} = B\ell = \mu_0 NI$$

$$B = \mu_0 \frac{N}{\ell} I = \mu_0 n I \quad (30.17)$$

where $n = N/\ell$ is the number of turns per unit length.

We also could obtain this result by reconsidering the magnetic field of a toroid (see Example 30.6). If the radius r of the torus in Figure 30.15 containing N turns is much greater than the toroid's cross-sectional radius a , a short section of the toroid approximates a solenoid for which $n = N/2\pi r$. In this limit, Equation 30.16 agrees with Equation 30.17.

Equation 30.17 is valid only for points near the center (that is, far from the ends) of a very long solenoid. As you might expect, the field near each end is smaller than the value given by Equation 30.17. As the length of a solenoid increases, the magnitude of the field at the end approaches half the magnitude at the center (see Problem 69).

- Quick Quiz 30.5** Consider a solenoid that is very long compared with its radius. Of the following choices, what is the most effective way to increase the magnetic field in the interior of the solenoid? (a) double its length, keeping the number of turns per unit length constant (b) reduce its radius by half, keeping the number of turns per unit length constant (c) overlap the entire solenoid with an additional layer of current-carrying wire

30.5 Gauss's Law in Magnetism

The flux associated with a magnetic field is defined in a manner similar to that used to define electric flux (see Eq. 24.3). Consider an element of area dA on an

arbitrarily shaped surface as shown in Figure 30.19. If the magnetic field at this element is \vec{B} , the magnetic flux through the element is $\vec{B} \cdot d\vec{A}$, where $d\vec{A}$ is a vector that is perpendicular to the surface and has a magnitude equal to the area dA . Therefore, the total magnetic flux Φ_B through the surface is

$$\Phi_B \equiv \int \vec{B} \cdot d\vec{A} \tag{30.18}$$

Consider the special case of a plane of area A in a uniform field \vec{B} that makes an angle θ with $d\vec{A}$. The magnetic flux through the plane in this case is

$$\Phi_B = BA \cos \theta \tag{30.19}$$

If the magnetic field is parallel to the plane as in Figure 30.20a, then $\theta = 90^\circ$ and the flux through the plane is zero. If the field is perpendicular to the plane as in Figure 30.20b, then $\theta = 0$ and the flux through the plane is BA (the maximum value).

The unit of magnetic flux is $T \cdot m^2$, which is defined as a *weber* (Wb); $1 \text{ Wb} = 1 \text{ T} \cdot m^2$.

◀ Definition of magnetic flux

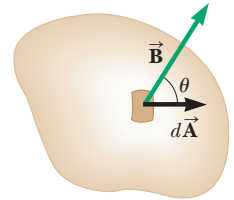


Figure 30.19 The magnetic flux through an area element dA is $\vec{B} \cdot d\vec{A} = B dA \cos \theta$, where $d\vec{A}$ is a vector perpendicular to the surface.

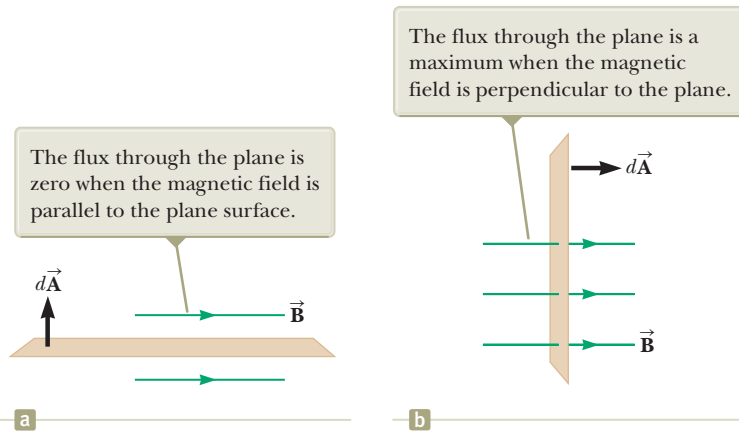


Figure 30.20 Magnetic flux through a plane lying in a magnetic field.

Example 30.7 Magnetic Flux Through a Rectangular Loop

A rectangular loop of width a and length b is located near a long wire carrying a current I (Fig. 30.21). The distance between the wire and the closest side of the loop is c . The wire is parallel to the long side of the loop. Find the total magnetic flux through the loop due to the current in the wire.

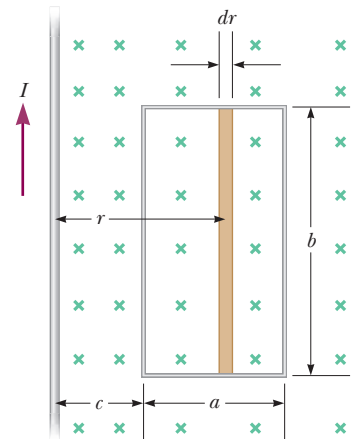
SOLUTION

Conceptualize As we saw in Section 30.3, the magnetic field lines due to the wire will be circles, many of which will pass through the rectangular loop. We know that the magnetic field is a function of distance r from a long wire. Therefore, the magnetic field varies over the area of the rectangular loop.

Categorize Because the magnetic field varies over the area of the loop, we must integrate over this area to find the total flux. That identifies this as an analysis problem.

Analyze Noting that \vec{B} is parallel to $d\vec{A}$ at any point within the loop, find the magnetic flux through the rectangular area using Equation 30.18 and incorporate Equation 30.14 for the magnetic field:

Figure 30.21 (Example 30.7) The magnetic field due to the wire carrying a current I is not uniform over the rectangular loop.



$$\Phi_B = \int \vec{B} \cdot d\vec{A} = \int B dA = \int \frac{\mu_0 I}{2\pi r} dA$$

continued

30.7 continued

Express the area element (the tan strip in Fig. 30.21) as $dA = b dr$ and substitute:

Integrate from $r = c$ to $r = a + c$:

$$\begin{aligned}\Phi_B &= \int \frac{\mu_0 I}{2\pi r} b dr = \frac{\mu_0 I b}{2\pi} \int \frac{dr}{r} \\ \Phi_B &= \frac{\mu_0 I b}{2\pi} \int_c^{a+c} \frac{dr}{r} = \frac{\mu_0 I b}{2\pi} \ln r \Big|_c^{a+c} \\ &= \frac{\mu_0 I b}{2\pi} \ln \left(\frac{a+c}{c} \right) = \frac{\mu_0 I b}{2\pi} \ln \left(1 + \frac{a}{c} \right)\end{aligned}$$

Finalize Notice how the flux depends on the size of the loop. Increasing either a or b increases the flux as expected. If c becomes large such that the loop is very far from the wire, the flux approaches zero, also as expected. If c goes to zero, the flux becomes infinite. In principle, this infinite value occurs because the field becomes infinite at $r = 0$ (assuming an infinitesimally thin wire). That will not happen in reality because the thickness of the wire prevents the left edge of the loop from reaching $r = 0$.

In Chapter 24, we found that the electric flux through a closed surface surrounding a net charge is proportional to that charge (Gauss's law). In other words, the number of electric field lines leaving the surface depends only on the net charge within it. This behavior exists because electric field lines originate and terminate on electric charges.

The situation is quite different for magnetic fields, which are continuous and form closed loops. In other words, as illustrated by the magnetic field lines of a current in Figure 30.9 and of a bar magnet in Figure 30.22, magnetic field lines do not begin or end at any point. For any closed surface such as the one outlined by the dashed line in Figure 30.22, the number of lines entering the surface equals the number leaving the surface; therefore, the net magnetic flux is zero. In contrast, for a closed surface surrounding one charge of an electric dipole (Fig. 30.23), the net electric flux is not zero.

Gauss's law in magnetism states that

the net magnetic flux through any closed surface is always zero:

Gauss's law in magnetism ▶

$$\oint \vec{\mathbf{B}} \cdot d\vec{\mathbf{A}} = 0 \quad (30.20)$$

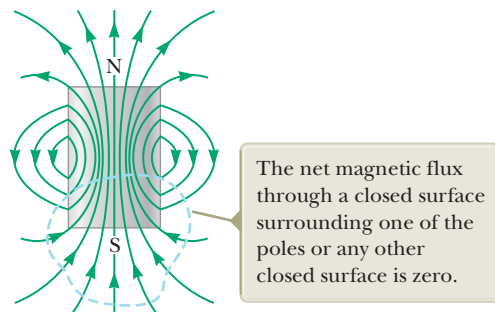


Figure 30.22 The magnetic field lines of a bar magnet form closed loops. (The dashed line represents the intersection of a closed surface with the page.)

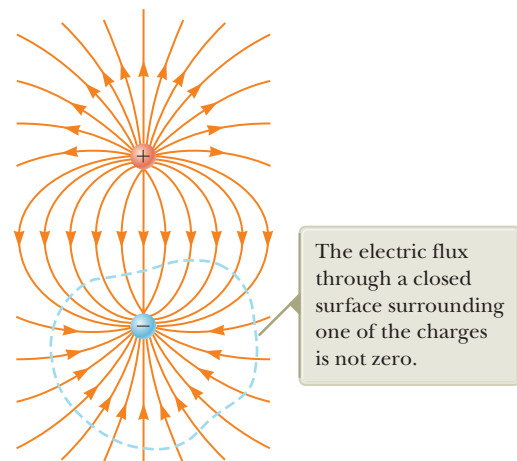


Figure 30.23 The electric field lines surrounding an electric dipole begin on the positive charge and terminate on the negative charge.

This statement represents that isolated magnetic poles (monopoles) have never been detected and perhaps do not exist. Nonetheless, scientists continue the search because certain theories that are otherwise successful in explaining fundamental physical behavior suggest the possible existence of magnetic monopoles.

30.6 Magnetism in Matter

The magnetic field produced by a current in a coil of wire gives us a hint as to what causes certain materials to exhibit strong magnetic properties. Earlier we found that a solenoid like the one shown in Figure 30.17a has a north pole and a south pole. In general, *any* current loop has a magnetic field and therefore has a magnetic dipole moment, including the atomic-level current loops described in some models of the atom.

The Magnetic Moments of Atoms

Let's begin our discussion with a classical model of the atom in which electrons move in circular orbits around the much more massive nucleus. In this model, an orbiting electron constitutes a tiny current loop (because it is a moving charge), and the magnetic moment of the electron is associated with this orbital motion. Although this model has many deficiencies, some of its predictions are in good agreement with the correct theory, which is expressed in terms of quantum physics.

In our classical model, we assume an electron is a particle in uniform circular motion: it moves with constant speed v in a circular orbit of radius r about the nucleus as in Figure 30.24. The current I associated with this orbiting electron is its charge e divided by its period T . Using Equation 4.15 from the particle in uniform circular motion model, $T = 2\pi r/v$, gives

$$I = \frac{e}{T} = \frac{ev}{2\pi r}$$

The magnitude of the magnetic moment associated with this current loop is given by $\mu = IA$, where $A = \pi r^2$ is the area enclosed by the orbit. Therefore,

$$\mu = IA = \left(\frac{ev}{2\pi r}\right)\pi r^2 = \frac{1}{2}evr \quad (30.21)$$

Because the magnitude of the orbital angular momentum of the electron is given by $L = m_e vr$ (Eq. 11.12 with $\phi = 90^\circ$), the magnetic moment can be written as

$$\mu = \left(\frac{e}{2m_e}\right)L \quad (30.22)$$

This result demonstrates that the magnetic moment of the electron is proportional to its orbital angular momentum. Because the electron is negatively charged, the vectors $\vec{\mu}$ and \vec{L} point in *opposite* directions. Both vectors are perpendicular to the plane of the orbit as indicated in Figure 30.24.

A fundamental outcome of quantum physics is that orbital angular momentum is quantized and is equal to multiples of $\hbar = h/2\pi = 1.05 \times 10^{-34} \text{ J} \cdot \text{s}$, where h is Planck's constant (see Chapter 40). The smallest nonzero value of the electron's magnetic moment resulting from its orbital motion is

$$\mu = \sqrt{2} \frac{e}{2m_e} \hbar \quad (30.23)$$

We shall see in Chapter 42 how expressions such as Equation 30.23 arise.

Because all substances contain electrons, you may wonder why most substances are not magnetic. The main reason is that, in most substances, the magnetic

The electron has an angular momentum \vec{L} in one direction and a magnetic moment $\vec{\mu}$ in the opposite direction.

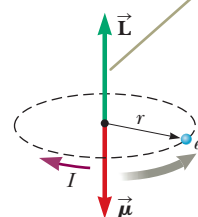


Figure 30.24 An electron moving in the direction of the gray arrow in a circular orbit of radius r . Because the electron carries a negative charge, the direction of the current due to its motion about the nucleus is opposite the direction of that motion.

◀ Orbital magnetic moment

Pitfall Prevention 30.3

The Electron Does Not Spin The electron is *not* physically spinning. It has an intrinsic angular momentum *as if it were spinning*, but the notion of rotation for a point particle is meaningless. Rotation applies only to a *rigid object*, with an extent in space, as in Chapter 10. Spin angular momentum is actually a relativistic effect.

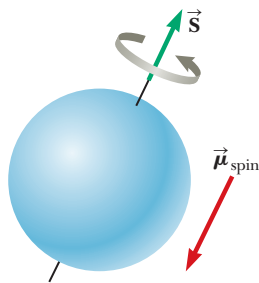


Figure 30.25 Classical model of a spinning electron. We can adopt this model to remind ourselves that electrons have an intrinsic angular momentum. The model should not be pushed too far, however; it gives an incorrect magnitude for the magnetic moment, incorrect quantum numbers, and too many degrees of freedom.

Table 30.1 Magnetic Moments of Some Atoms and Ions

Atom or Ion	Magnetic Moment (10^{-24} J/T)
H	9.27
He	0
Ne	0
Ce ³⁺	19.8
Yb ³⁺	37.1

moment of one electron in an atom is canceled by that of another electron orbiting in the opposite direction. The net result is that, for most materials, the magnetic effect produced by the orbital motion of the electrons is either zero or very small.

In addition to its orbital magnetic moment, an electron (as well as protons, neutrons, and other particles) has an intrinsic property called **spin** that also contributes to its magnetic moment. Classically, the electron might be viewed as spinning about its axis as shown in Figure 30.25, but you should be very careful with the classical interpretation. The magnitude of the angular momentum \vec{S} associated with spin is on the same order of magnitude as the magnitude of the angular momentum \vec{L} due to the orbital motion. The magnitude of the spin angular momentum of an electron predicted by quantum theory is

$$S = \frac{\sqrt{3}}{2} \hbar$$

The magnetic moment characteristically associated with the spin of an electron has the value

$$\mu_{\text{spin}} = \frac{e\hbar}{2m_e} \quad (30.24)$$

This combination of constants is called the **Bohr magneton** μ_B :

$$\mu_B = \frac{e\hbar}{2m_e} = 9.27 \times 10^{-24} \text{ J/T} \quad (30.25)$$

Therefore, atomic magnetic moments can be expressed as multiples of the Bohr magneton. (Note that $1 \text{ J/T} = 1 \text{ A} \cdot \text{m}^2$.)

In atoms containing many electrons, the electrons usually pair up with their spins opposite each other; therefore, the spin magnetic moments cancel. Atoms containing an odd number of electrons, however, must have at least one unpaired electron and therefore some spin magnetic moment. The total magnetic moment of an atom is the vector sum of the orbital and spin magnetic moments, and a few examples are given in Table 30.1. Notice that helium and neon have zero moments because their individual spin and orbital moments cancel.

The nucleus of an atom also has a magnetic moment associated with its constituent protons and neutrons. The magnetic moment of a proton or neutron, however, is much smaller than that of an electron and can usually be neglected. We can understand this smaller value by inspecting Equation 30.25 and replacing the mass of the electron with the mass of a proton or a neutron. Because the masses of the proton and neutron are much greater than that of the electron, their magnetic moments are on the order of 10^3 times smaller than that of the electron.

Ferromagnetism

A small number of crystalline substances exhibit strong magnetic effects called **ferromagnetism**. Some examples of ferromagnetic substances are iron, cobalt, nickel, gadolinium, and dysprosium. These substances contain permanent atomic magnetic moments that tend to align parallel to each other even in a weak external magnetic field. Once the moments are aligned, the substance remains magnetized after the external field is removed. This permanent alignment is due to a strong coupling between neighboring moments, a coupling that can be understood only in quantum-mechanical terms.

All ferromagnetic materials are made up of microscopic regions called **domains**, regions within which all magnetic moments are aligned. These domains have volumes of about 10^{-12} to 10^{-8} m^3 and contain 10^{17} to 10^{21} atoms. The boundaries between the various domains having different orientations are called **domain walls**. In an unmagnetized sample, the magnetic moments in the domains are randomly

oriented so that the net magnetic moment is zero as in Figure 30.26a. When the sample is placed in an external magnetic field \vec{B} , the size of those domains with magnetic moments aligned with the field grows, which results in a magnetized sample as in Figure 30.26b. As the external field becomes very strong as in Figure 30.26c, the domains in which the magnetic moments are not aligned with the field become very small. When the external field is removed, the sample may retain a net magnetization in the direction of the original field. At ordinary temperatures, thermal agitation is not sufficient to disrupt this preferred orientation of magnetic moments.

When the temperature of a ferromagnetic substance reaches or exceeds a critical temperature called the **Curie temperature**, the substance loses its residual magnetization. Below the Curie temperature, the magnetic moments are aligned and the substance is ferromagnetic. Above the Curie temperature, the thermal agitation is great enough to cause a random orientation of the moments and the substance becomes paramagnetic. Curie temperatures for several ferromagnetic substances are given in Table 30.2.

Paramagnetism

Paramagnetic substances have a weak magnetism resulting from the presence of atoms (or ions) that have permanent magnetic moments. These moments interact only weakly with one another and are randomly oriented in the absence of an external magnetic field. When a paramagnetic substance is placed in an external magnetic field, its atomic moments tend to line up with the field. This alignment process, however, must compete with thermal motion, which tends to randomize the magnetic moment orientations.

Diamagnetism


When an external magnetic field is applied to a diamagnetic substance, a weak magnetic moment is induced in the direction opposite the applied field, causing diamagnetic substances to be weakly repelled by a magnet. Although diamagnetism is present in all matter, its effects are much smaller than those of paramagnetism or ferromagnetism and are evident only when those other effects do not exist.

We can attain some understanding of diamagnetism by considering a classical model of two atomic electrons orbiting the nucleus in opposite directions but with the same speed. The electrons remain in their circular orbits because of the attractive electrostatic force exerted by the positively charged nucleus. Because the magnetic moments of the two electrons are equal in magnitude and opposite in direction, they cancel each other and the magnetic moment of the atom is zero. When an external magnetic field is applied, the electrons experience an additional magnetic force $q\vec{v} \times \vec{B}$. This added magnetic force combines with the electrostatic force to increase the orbital speed of the electron whose magnetic moment is antiparallel to the field and to decrease the speed of the electron whose magnetic moment is parallel to the field. As a result, the two magnetic moments of the electrons no longer cancel and the substance acquires a net magnetic moment that is opposite the applied field.

Table 30.2 Curie Temperatures for Several Ferromagnetic Substances

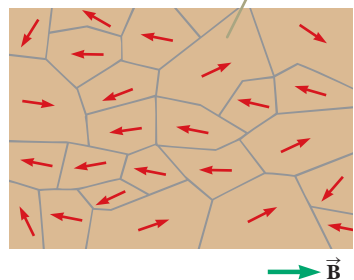
Substance	T_{Curie} (K)
Iron	1 043
Cobalt	1 394
Nickel	631
Gadolinium	317
Fe_2O_3	893

In an unmagnetized substance, the atomic magnetic dipoles are randomly oriented.



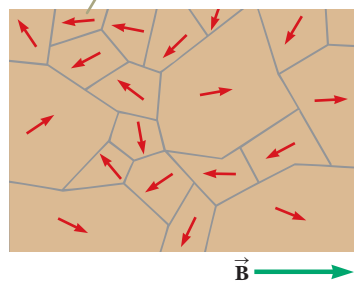
a

When an external field \vec{B} is applied, the domains with components of magnetic moment in the same direction as \vec{B} grow larger, giving the sample a net magnetization.



b

As the field is made even stronger, the domains with magnetic moment vectors not aligned with the external field become very small.



c

Figure 30.26 Orientation of magnetic dipoles before and after a magnetic field is applied to a ferromagnetic substance.

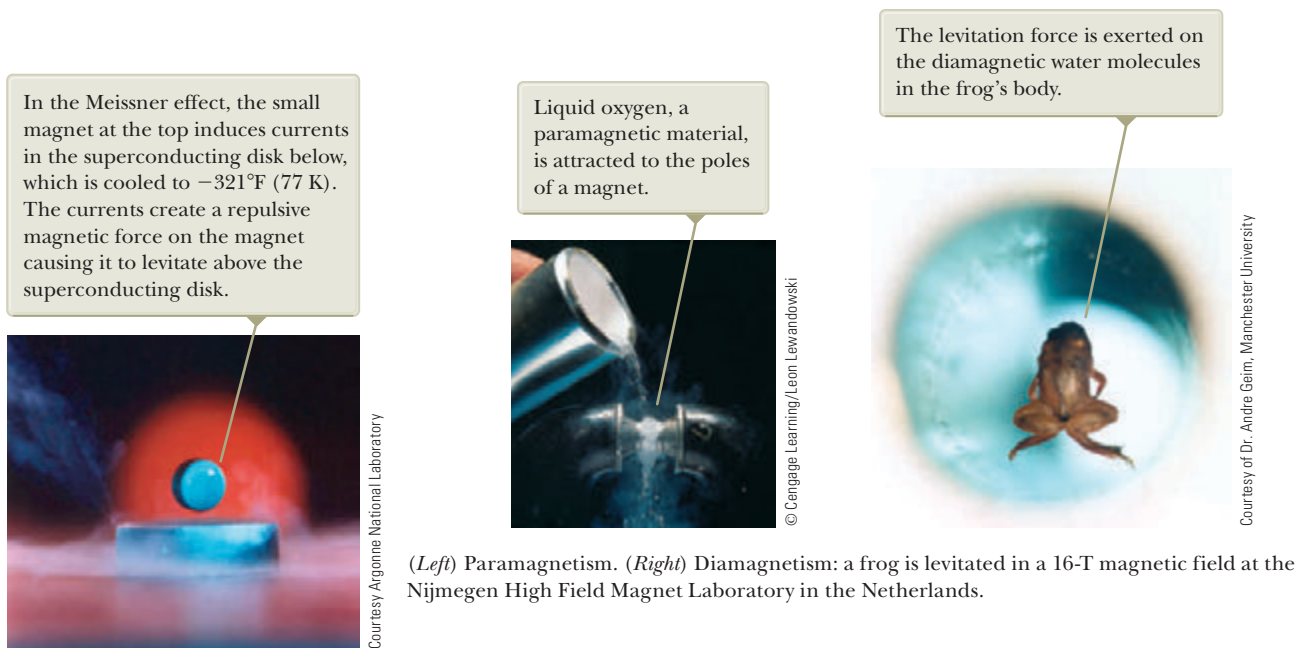


Figure 30.27 An illustration of the Meissner effect, shown by this magnet suspended above a cooled ceramic superconductor disk, has become our most visual image of high-temperature superconductivity. Superconductivity is the loss of all resistance to electrical current and is a key to more-efficient energy use.

As you recall from Chapter 27, a superconductor is a substance in which the electrical resistance is zero below some critical temperature. Certain types of superconductors also exhibit perfect diamagnetism in the superconducting state. As a result, an applied magnetic field is expelled by the superconductor so that the field is zero in its interior. This phenomenon is known as the **Meissner effect**. If a permanent magnet is brought near a superconductor, the two objects repel each other. This repulsion is illustrated in Figure 30.27, which shows a small permanent magnet levitated above a superconductor maintained at 77 K .

Summary

Definition

The **magnetic flux** Φ_B through a surface is defined by the surface integral

$$\Phi_B \equiv \int \vec{\mathbf{B}} \cdot d\vec{\mathbf{A}} \quad (30.18)$$

Concepts and Principles

The **Biot–Savart law** says that the magnetic field $d\vec{\mathbf{B}}$ at a point P due to a length element $d\vec{\mathbf{s}}$ that carries a steady current I is

$$d\vec{\mathbf{B}} = \frac{\mu_0}{4\pi} \frac{I d\vec{\mathbf{s}} \times \hat{\mathbf{r}}}{r^2} \quad (30.1)$$

where μ_0 is the **permeability of free space**, r is the distance from the element to the point P , and $\hat{\mathbf{r}}$ is a unit vector pointing from $d\vec{\mathbf{s}}$ toward point P . We find the total field at P by integrating this expression over the entire current distribution.

The magnetic force per unit length between two parallel wires separated by a distance a and carrying currents I_1 and I_2 has a magnitude

$$\frac{F_B}{\ell} = \frac{\mu_0 I_1 I_2}{2\pi a} \quad (30.12)$$

The force is attractive if the currents are in the same direction and repulsive if they are in opposite directions.

■ **Ampère's law** says that the line integral of $\vec{B} \cdot d\vec{s}$ around any closed path equals $\mu_0 I$, where I is the total steady current through any surface bounded by the closed path:

$$\oint \vec{B} \cdot d\vec{s} = \mu_0 I \quad (30.13)$$

■ **Gauss's law of magnetism** states that the net magnetic flux through any closed surface is zero:

$$\oint \vec{B} \cdot d\vec{A} = 0 \quad (30.20)$$

■ The magnitude of the magnetic field at a distance r from a long, straight wire carrying an electric current I is

$$B = \frac{\mu_0 I}{2\pi r} \quad (30.14)$$

The field lines are circles concentric with the wire.

The magnitudes of the fields inside a toroid and solenoid are

$$B = \frac{\mu_0 N I}{2\pi r} \quad (\text{toroid}) \quad (30.16)$$

$$B = \mu_0 \frac{N}{\ell} I = \mu_0 n I \quad (\text{solenoid}) \quad (30.17)$$

where N is the total number of turns.

■ Substances can be classified into one of three categories that describe their magnetic behavior. **Diamagnetic** substances are those in which the magnetic moment is weak and opposite the applied magnetic field. **Paramagnetic** substances are those in which the magnetic moment is weak and in the same direction as the applied magnetic field. In **ferromagnetic** substances, interactions between atoms cause magnetic moments to align and create a strong magnetization that remains after the external field is removed.

Objective Questions

1. denotes answer available in *Student Solutions Manual/Study Guide*

- (i) What happens to the magnitude of the magnetic field inside a long solenoid if the current is doubled? (a) It becomes four times larger. (b) It becomes twice as large. (c) It is unchanged. (d) It becomes one-half as large. (e) It becomes one-fourth as large. (ii) What happens to the field if instead the length of the solenoid is doubled, with the number of turns remaining the same? Choose from the same possibilities as in part (i). (iii) What happens to the field if the number of turns is doubled, with the length remaining the same? Choose from the same possibilities as in part (i). (iv) What happens to the field if the radius is doubled? Choose from the same possibilities as in part (i).
- In Figure 30.7, assume $I_1 = 2.00$ A and $I_2 = 6.00$ A. What is the relationship between the magnitude F_1 of the force exerted on wire 1 and the magnitude F_2 of the force exerted on wire 2? (a) $F_1 = 6F_2$ (b) $F_1 = 3F_2$ (c) $F_1 = F_2$ (d) $F_1 = \frac{1}{3}F_2$ (e) $F_1 = \frac{1}{6}F_2$
- Answer each question yes or no. (a) Is it possible for each of three stationary charged particles to exert a force of attraction on the other two? (b) Is it possible for each of three stationary charged particles to repel both of the other particles? (c) Is it possible for each of three current-carrying metal wires to attract the other two wires? (d) Is it possible for each of three current-carrying metal wires to repel the other two wires? André-Marie Ampère's experiments on electromagnetism are models of logical precision and included observation of the phenomena referred to in this question.
- Two long, parallel wires each carry the same current I in the same direction (Fig. OQ30.4). Is the total magnetic

field at the point P midway between the wires (a) zero, (b) directed into the page, (c) directed out of the page, (d) directed to the left, or (e) directed to the right?

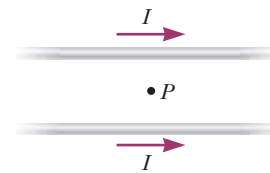


Figure OQ30.4

- Two long, straight wires cross each other at a right angle, and each carries the same current I (Fig. OQ30.5). Which of the following statements is true regarding the total magnetic field due to the two wires at the various points in the figure? More than one statement may be correct. (a) The field is strongest at points B and D . (b) The field is strongest at points A and C . (c) The field is out of the page at point B and

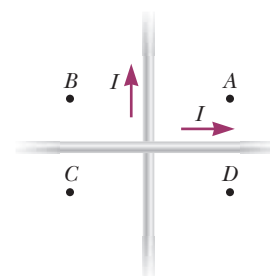


Figure OQ30.5

into the page at point D . (d) The field is out of the page at point C and out of the page at point D . (e) The field has the same magnitude at all four points.

6. A long, vertical, metallic wire carries downward electric current. (i) What is the direction of the magnetic field it creates at a point 2 cm horizontally east of the center of the wire? (a) north (b) south (c) east (d) west (e) up (ii) What would be the direction of the field if the current consisted of positive charges moving downward instead of electrons moving upward? Choose from the same possibilities as in part (i).
7. Suppose you are facing a tall makeup mirror on a vertical wall. Fluorescent tubes framing the mirror carry a clockwise electric current. (i) What is the direction of the magnetic field created by that current at the center of the mirror? (a) left (b) right (c) horizontally toward you (d) horizontally away from you (e) no direction because the field has zero magnitude (ii) What is the direction of the field the current creates at a point on the wall outside the frame to the right? Choose from the same possibilities as in part (i).
8. A long, straight wire carries a current I (Fig. OQ30.8). Which of the following statements is true regarding the magnetic field due to the wire? More than one statement may be correct. (a) The magnitude is proportional to I/r , and the direction is out of the page at P . (b) The magnitude is proportional to I/r^2 , and the direction is out of the page at P . (c) The magnitude is proportional to I/r , and the direction is into the page at P . (d) The magnitude is proportional to I/r^2 , and the direction is into the page at P . (e) The magnitude is proportional to I , but does not depend on r .

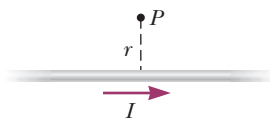


Figure OQ30.8

9. Two long, parallel wires carry currents of 20.0 A and 10.0 A in opposite directions (Fig. OQ30.9). Which of the following statements is true? More than one state-

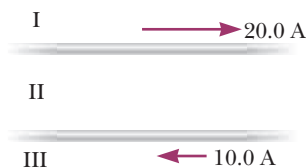


Figure OQ30.9 Objective Questions 9 and 10.

ment may be correct. (a) In region I, the magnetic field is into the page and is never zero. (b) In region II, the field is into the page and can be zero. (c) In region III, it is possible for the field to be zero. (d) In region I, the magnetic field is out of the page and is never zero. (e) There are no points where the field is zero.

10. Consider the two parallel wires carrying currents in opposite directions in Figure OQ30.9. Due to the magnetic interaction between the wires, does the lower wire experience a magnetic force that is (a) upward, (b) downward, (c) to the left, (d) to the right, or (e) into the paper?
11. What creates a magnetic field? More than one answer may be correct. (a) a stationary object with electric charge (b) a moving object with electric charge (c) a stationary conductor carrying electric current (d) a difference in electric potential (e) a charged capacitor disconnected from a battery and at rest *Note:* In Chapter 34, we will see that a changing electric field also creates a magnetic field.
12. A long solenoid with closely spaced turns carries electric current. Does each turn of wire exert (a) an attractive force on the next adjacent turn, (b) a repulsive force on the next adjacent turn, (c) zero force on the next adjacent turn, or (d) either an attractive or a repulsive force on the next turn, depending on the direction of current in the solenoid?
13. A uniform magnetic field is directed along the x axis. For what orientation of a flat, rectangular coil is the flux through the rectangle a maximum? (a) It is a maximum in the xy plane. (b) It is a maximum in the xz plane. (c) It is a maximum in the yz plane. (d) The flux has the same nonzero value for all these orientations. (e) The flux is zero in all cases.
14. Rank the magnitudes of the following magnetic fields from largest to smallest, noting any cases of equality. (a) the field 2 cm away from a long, straight wire carrying a current of 3 A (b) the field at the center of a flat, compact, circular coil, 2 cm in radius, with 10 turns, carrying a current of 0.3 A (c) the field at the center of a solenoid 2 cm in radius and 200 cm long, with 1 000 turns, carrying a current of 0.3 A (d) the field at the center of a long, straight, metal bar, 2 cm in radius, carrying a current of 300 A (e) a field of 1 mT
15. Solenoid A has length L and N turns, solenoid B has length $2L$ and N turns, and solenoid C has length $L/2$ and $2N$ turns. If each solenoid carries the same current, rank the magnitudes of the magnetic fields in the centers of the solenoids from largest to smallest.

Conceptual Questions

I. denotes answer available in *Student Solutions Manual/Study Guide*

- Is the magnetic field created by a current loop uniform? Explain.
- One pole of a magnet attracts a nail. Will the other pole of the magnet attract the nail? Explain. Also explain how a magnet sticks to a refrigerator door.
- Compare Ampère's law with the Biot-Savart law. Which is more generally useful for calculating \vec{B} for a current-carrying conductor?
- A hollow copper tube carries a current along its length. Why is $B = 0$ inside the tube? Is B nonzero outside the tube?

- Imagine you have a compass whose needle can rotate vertically as well as horizontally. Which way would the compass needle point if you were at the Earth's north magnetic pole?
- Is Ampère's law valid for all closed paths surrounding a conductor? Why is it not useful for calculating \vec{B} for all such paths?
- A magnet attracts a piece of iron. The iron can then attract another piece of iron. On the basis of domain alignment, explain what happens in each piece of iron.
- Why does hitting a magnet with a hammer cause the magnetism to be reduced?
- The quantity $\int \vec{B} \cdot d\vec{s}$ in Ampère's law is called *magnetic circulation*. Figures 30.10 and 30.13 show paths around which the magnetic circulation is evaluated. Each of these paths encloses an area. What is the magnetic flux through each area? Explain your answer.

- Figure CQ30.10 shows four permanent magnets, each having a hole through its center. Notice that the blue and yellow magnets are levitated above the red ones. (a) How does this levitation occur? (b) What purpose do the rods serve? (c) What can you say about the poles of the magnets from this observation? (d) If the blue magnet were inverted, what do you suppose would happen?



© Cengage Learning/Charles D. Winters

Figure CQ30.10

- Explain why two parallel wires carrying currents in opposite directions repel each other.
- Consider a magnetic field that is uniform in direction throughout a certain volume. (a) Can the field be uniform in magnitude? (b) Must it be uniform in magnitude? Give evidence for your answers.

Problems



The problems found in this chapter may be assigned online in Enhanced WebAssign

- straightforward; 2. intermediate; 3. challenging

- full solution available in the *Student Solutions Manual/Study Guide*



Analysis Model tutorial available in Enhanced WebAssign



Guided Problem



Master It tutorial available in Enhanced WebAssign



Watch It video solution available in Enhanced WebAssign

Section 30.1 The Biot–Savart Law

- Review.** In studies of the possibility of migrating birds using the Earth's magnetic field for navigation, birds have been fitted with coils as “caps” and “collars” as shown in Figure P30.1. (a) If the identical coils have radii of 1.20 cm and are 2.20 cm apart, with 50 turns of wire apiece, what current should they both carry to produce a magnetic field of 4.50×10^{-5} T halfway between them? (b) If the resistance of each coil is 210Ω , what voltage should the battery supplying each coil have? (c) What power is delivered to each coil?




Figure P30.1

- In each of parts (a) through (c) of Figure P30.2, find the direction of the current in the wire that would produce a magnetic field directed as shown.

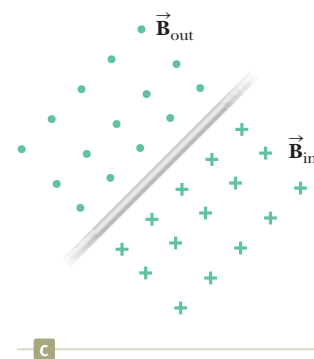
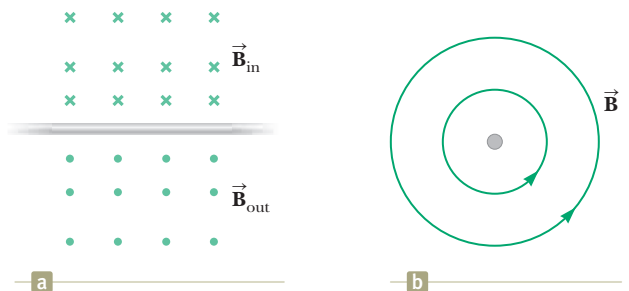


Figure P30.2

- Calculate the magnitude of the magnetic field at a point 25.0 cm from a long, thin conductor carrying a current of 2.00 A.

4. In 1962, measurements of the magnetic field of a large tornado were made at the Geophysical Observatory in Tulsa, Oklahoma. If the magnitude of the tornado's field was $B = 1.50 \times 10^{-8} \text{ T}$ pointing north when the tornado was 9.00 km east of the observatory, what current was carried up or down the funnel of the tornado? Model the vortex as a long, straight wire carrying a current.

5. (a) A conducting loop in the shape of a square of edge length $\ell = 0.400 \text{ m}$ carries a current $I = 10.0 \text{ A}$ as shown in Figure P30.5. Calculate the magnitude and direction of the magnetic field at the center of the square. (b) **What If?** If this conductor is reshaped to form a circular loop and carries the same current, what is the value of the magnetic field at the center?

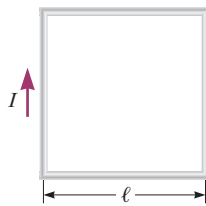


Figure P30.5

6. In Niels Bohr's 1913 model of the hydrogen atom, an electron circles the proton at a distance of $5.29 \times 10^{-11} \text{ m}$ with a speed of $2.19 \times 10^6 \text{ m/s}$. Compute the magnitude of the magnetic field this motion produces at the location of the proton.
7. A conductor consists of a circular loop of radius $R = 15.0 \text{ cm}$ and two long, straight sections as shown in Figure P30.7. The wire lies in the plane of the paper and carries a current $I = 1.00 \text{ A}$. Find the magnetic field at the center of the loop.

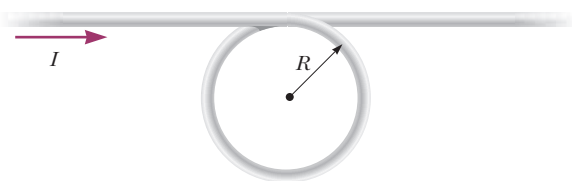


Figure P30.7 Problems 7 and 8.

8. A conductor consists of a circular loop of radius R and two long, straight sections as shown in Figure P30.7. The wire lies in the plane of the paper and carries a current I . (a) What is the direction of the magnetic field at the center of the loop? (b) Find an expression for the magnitude of the magnetic field at the center of the loop.
9. Two long, straight, parallel wires carry currents that are directed perpendicular to the page as shown in Figure P30.9. Wire 1 carries a current I_1 into the page (in the negative z direction) and passes through the x axis at $x = +a$. Wire 2 passes through the x axis at $x = -2a$ and carries an unknown cur-

rent I_2 . The total magnetic field at the origin due to the current-carrying wires has the magnitude $2\mu_0 I_1 / (2\pi a)$. The current I_2 can have either of two possible values. (a) Find the value of I_2 with the smaller magnitude, stating it in terms of I_1 and giving its direction. (b) Find the other possible value of I_2 .

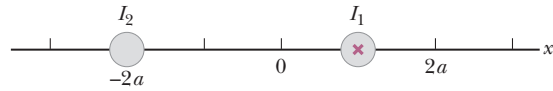


Figure P30.9

10. An infinitely long wire carrying a current I is bent at a right angle as shown in Figure P30.10. Determine the magnetic field at point P , located a distance x from the corner of the wire.

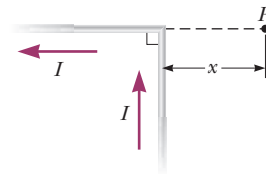


Figure P30.10

11. A long, straight wire carries a current I . A right-angle bend is made in the middle of the wire. The bend forms an arc of a circle of radius r as shown in Figure P30.11. Determine the magnetic field at point P , the center of the arc.

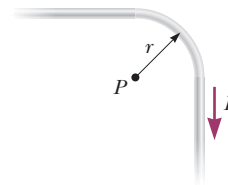


Figure P30.11

12. Consider a flat, circular current loop of radius R carrying a current I . Choose the x axis to be along the axis of the loop, with the origin at the loop's center. Plot a graph of the ratio of the magnitude of the magnetic field at coordinate x to that at the origin for $x = 0$ to $x = 5R$. It may be helpful to use a programmable calculator or a computer to solve this problem.
13. A current path shaped as shown in Figure P30.13 produces a magnetic field at P , the center of the arc. If the arc subtends an angle of $\theta = 30.0^\circ$ and the radius of the arc is 0.600 m, what are the magnitude and

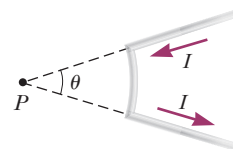


Figure P30.13

direction of the field produced at P if the current is 3.00 A?

- 14.** One long wire carries current 30.0 A to the left along the x axis. A second long wire carries current 50.0 A to the right along the line ($y = 0.280$ m, $z = 0$). (a) Where in the plane of the two wires is the total magnetic field equal to zero? (b) A particle with a charge of -2.00 μC is moving with a velocity of $150\hat{i}$ Mm/s along the line ($y = 0.100$ m, $z = 0$). Calculate the vector magnetic force acting on the particle. (c) **What If?** A uniform electric field is applied to allow this particle to pass through this region undeflected. Calculate the required vector electric field.

- 15.** Three long, parallel conductors each carry a current of $I = 2.00$ A. Figure P30.15 is an end view of the conductors, with each current coming out of the page. Taking $a = 1.00$ cm, determine the magnitude and direction of the magnetic field at (a) point A, (b) point B, and (c) point C.

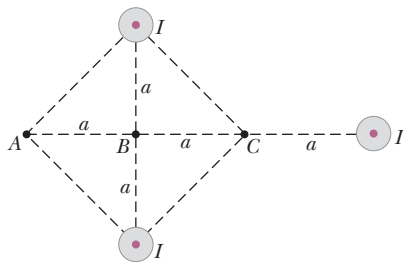


Figure P30.15

- 16.** In a long, straight, vertical lightning stroke, electrons move downward and positive ions move upward and constitute a current of magnitude 20.0 kA. At a location 50.0 m east of the middle of the stroke, a free electron drifts through the air toward the west with a speed of 300 m/s. (a) Make a sketch showing the various vectors involved. Ignore the effect of the Earth's magnetic field. (b) Find the vector force the lightning stroke exerts on the electron. (c) Find the radius of the electron's path. (d) Is it a good approximation to model the electron as moving in a uniform field? Explain your answer. (e) If it does not collide with any obstacles, how many revolutions will the electron complete during the 60.0- μs duration of the lightning stroke?
- 17.** Determine the magnetic field (in terms of I , a , and d) at the origin due to the current loop in Figure P30.17. The loop extends to infinity above the figure.

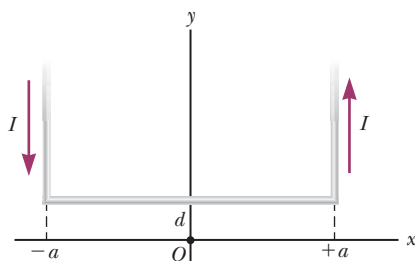


Figure P30.17

- 18.** A wire carrying a current I is bent into the shape of an equilateral triangle of side L . (a) Find the magnitude of the magnetic field at the center of the triangle. (b) At a point halfway between the center and any vertex, is the field stronger or weaker than at the center? Give a qualitative argument for your answer.

- 19.** The two wires shown in Figure P30.19 are separated by $d = 10.0$ cm and carry currents of $I = 5.00$ A in opposite directions. Find the magnitude and direction of the net magnetic field (a) at a point midway between the wires; (b) at point P_1 , 10.0 cm to the right of the wire on the right; and (c) at point P_2 , $2d = 20.0$ cm to the left of the wire on the left.

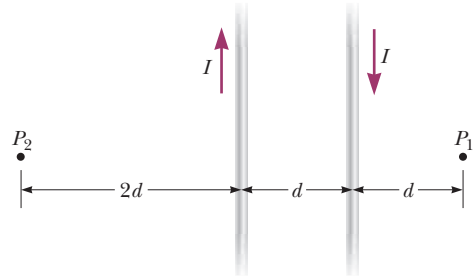


Figure P30.19

- 20.** Two long, parallel wires carry currents of $I_1 = 3.00$ A and $I_2 = 5.00$ A in the directions indicated in Figure P30.20. (a) Find the magnitude and direction of the magnetic field at a point midway between the wires. (b) Find the magnitude and direction of the magnetic field at point P , located $d = 20.0$ cm above the wire carrying the 5.00-A current.

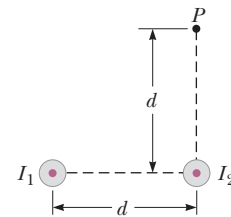


Figure P30.20

Section 30.2 The Magnetic Force Between Two Parallel Conductors

- 21.** Two long, parallel conductors, separated by 10.0 cm, carry currents in the same direction. The first wire carries a current $I_1 = 5.00$ A, and the second carries $I_2 = 8.00$ A. (a) What is the magnitude of the magnetic field created by I_1 at the location of I_2 ? (b) What is the force per unit length exerted by I_1 on I_2 ? (c) What is the magnitude of the magnetic field created by I_2 at the location of I_1 ? (d) What is the force per length exerted by I_2 on I_1 ?
- 22.** Two parallel wires separated by 4.00 cm repel each other with a force per unit length of 2.00×10^{-4} N/m. The current in one wire is 5.00 A. (a) Find the current in the other wire. (b) Are the currents in the same

direction or in opposite directions? (c) What would happen if the direction of one current were reversed and doubled?

23. Two parallel wires are separated by 6.00 cm, each carrying 3.00 A of current in the same direction. (a) What is the magnitude of the force per unit length between the wires? (b) Is the force attractive or repulsive?
24. Two long wires hang vertically. Wire 1 carries an upward current of 1.50 A. Wire 2, 20.0 cm to the right of wire 1, carries a downward current of 4.00 A. A third wire, wire 3, is to be hung vertically and located such that when it carries a certain current, each wire experiences no net force. (a) Is this situation possible? Is it possible in more than one way? Describe (b) the position of wire 3 and (c) the magnitude and direction of the current in wire 3.

25. In Figure P30.25, the current in the long, straight wire is $I_1 = 5.00$ A and the wire lies in the plane of the rectangular loop, which carries a current $I_2 = 10.0$ A. The dimensions in the figure are $c = 0.100$ m, $a = 0.150$ m, and $\ell = 0.450$ m. Find the magnitude and direction of the net force exerted on the loop by the magnetic field created by the wire.

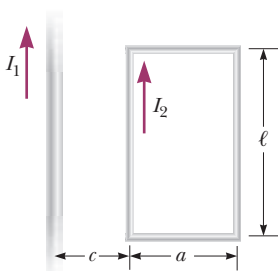


Figure P30.25 Problems 25 and 26.

26. In Figure P30.25, the current in the long, straight wire is I_1 and the wire lies in the plane of a rectangular loop, which carries a current I_2 . The loop is of length ℓ and width a . Its left end is a distance c from the wire. Find the magnitude and direction of the net force exerted on the loop by the magnetic field created by the wire.
27. Two long, parallel wires are attracted to each other by a force per unit length of $320 \mu\text{N/m}$. One wire carries a current of 20.0 A to the right and is located along the line $y = 0.500$ m. The second wire lies along the x axis. Determine the value of y for the line in the plane of the two wires along which the total magnetic field is zero.
28. Why is the following situation impossible? Two parallel copper conductors each have length $\ell = 0.500$ m and radius $r = 250 \mu\text{m}$. They carry currents $I = 10.0$ A in opposite directions and repel each other with a magnetic force $F_B = 1.00$ N.
29. The unit of magnetic flux is named for Wilhelm Weber. A practical-size unit of magnetic field is named for Johann Karl Friedrich Gauss. Along with their indi-

vidual accomplishments, Weber and Gauss built a telegraph in 1833 that consisted of a battery and switch, at one end of a transmission line 3 km long, operating an electromagnet at the other end. Suppose their transmission line was as diagrammed in Figure P30.29. Two long, parallel wires, each having a mass per unit length of 40.0 g/m, are supported in a horizontal plane by strings $\ell = 6.00$ cm long. When both wires carry the same current I , the wires repel each other so that the angle between the supporting strings is $\theta = 16.0^\circ$. (a) Are the currents in the same direction or in opposite directions? (b) Find the magnitude of the current. (c) If this transmission line were taken to Mars, would the current required to separate the wires by the same angle be larger or smaller than that required on the Earth? Why?




Figure P30.29

Section 30.3 Ampère's Law

30. Niobium metal becomes a superconductor when cooled below 9 K. Its superconductivity is destroyed when the surface magnetic field exceeds 0.100 T. In the absence of any external magnetic field, determine the maximum current a 2.00-mm-diameter niobium wire can carry and remain superconducting.

31. Figure P30.31 is a cross-sectional view of a coaxial cable. The center conductor is surrounded by a rubber layer, an outer conductor, and another rubber layer. In a particular application, the current in the inner conductor is $I_1 = 1.00$ A out of the page and the current in the outer conductor is $I_2 = 3.00$ A into the page. Assuming the distance $d = 1.00$ mm, determine the magnitude and direction of the magnetic field at (a) point a and (b) point b .

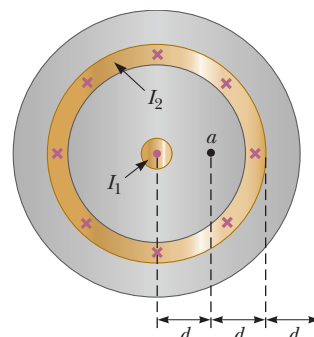


Figure P30.31

32. The magnetic coils of a tokamak fusion reactor are in the shape of a toroid having an inner radius of 0.700 m and an outer radius of 1.30 m. The toroid has 900 turns of large-diameter wire, each of which carries a current of 14.0 kA. Find the magnitude of the mag-

netic field inside the toroid along (a) the inner radius and (b) the outer radius.

33. A long, straight wire lies on a horizontal table and carries a current of $1.20 \mu\text{A}$. In a vacuum, a proton moves parallel to the wire (opposite the current) with a constant speed of $2.30 \times 10^4 \text{ m/s}$ at a distance d above the wire. Ignoring the magnetic field due to the Earth, determine the value of d .
34. An infinite sheet of current lying in the yz plane carries a surface current of linear density J_s . The current is in the positive z direction, and J_s represents the current per unit length measured along the y axis. Figure P30.34 is an edge view of the sheet. Prove that the magnetic field near the sheet is parallel to the sheet and perpendicular to the current direction, with magnitude $\mu_0 J_s / 2$.

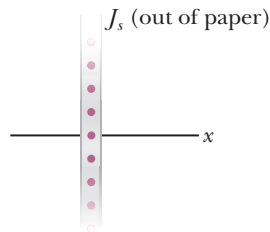


Figure P30.34

35. The magnetic field 40.0 cm away from a long, straight wire carrying current 2.00 A is $1.00 \mu\text{T}$. (a) At what distance is it $0.100 \mu\text{T}$? (b) **What If?** At one instant, the two conductors in a long household extension cord carry equal 2.00-A currents in opposite directions. The two wires are 3.00 mm apart. Find the magnetic field 40.0 cm away from the middle of the straight cord, in the plane of the two wires. (c) At what distance is it one-tenth as large? (d) The center wire in a coaxial cable carries current 2.00 A in one direction, and the sheath around it carries current 2.00 A in the opposite direction. What magnetic field does the cable create at points outside the cable?
36. A packed bundle of 100 long, straight, insulated wires forms a cylinder of radius $R = 0.500 \text{ cm}$. If each wire carries 2.00 A , what are (a) the magnitude and (b) the direction of the magnetic force per unit length acting on a wire located 0.200 cm from the center of the bundle? (c) **What If?** Would a wire on the outer edge of the bundle experience a force greater or smaller than the value calculated in parts (a) and (b)? Give a qualitative argument for your answer.
37. The magnetic field created by a large current passing through plasma (ionized gas) can force current-carrying particles together. This *pinch effect* has been used in designing fusion reactors. It can be demonstrated by making an empty aluminum can carry a large current parallel to its axis. Let R represent the radius of the can and I the current, uniformly distributed over the can's curved wall. Determine the magnetic field (a) just inside the wall and (b) just outside. (c) Determine the pressure on the wall.

38. A long, cylindrical conductor of radius R carries a current I as shown in Figure P30.38. The current density J , however, is not uniform over the cross section of the conductor but rather is a function of the radius according to $J = br$, where b is a constant. Find an expression for the magnetic field magnitude B (a) at a distance $r_1 < R$ and (b) at a distance $r_2 > R$, measured from the center of the conductor.

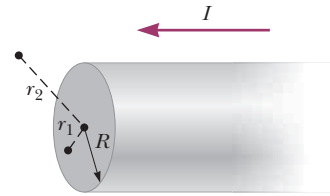


Figure P30.38

39. Four long, parallel conductors carry equal currents of $I = 5.00 \text{ A}$. Figure P30.39 is an end view of the conductors. The current direction is into the page at points A and B and out of the page at points C and D . Calculate (a) the magnitude and (b) the direction of the magnetic field at point P , located at the center of the square of edge length $\ell = 0.200 \text{ m}$.

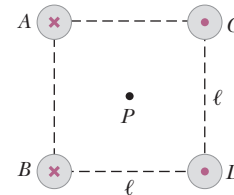


Figure P30.39

Section 30.4 The Magnetic Field of a Solenoid

40. A certain superconducting magnet in the form of a solenoid of length 0.500 m can generate a magnetic field of 9.00 T in its core when its coils carry a current of 75.0 A . Find the number of turns in the solenoid.
41. A long solenoid that has $1\,000$ turns uniformly distributed over a length of 0.400 m produces a magnetic field of magnitude $1.00 \times 10^{-4} \text{ T}$ at its center. What current is required in the windings for that to occur?
42. You are given a certain volume of copper from which you can make copper wire. To insulate the wire, you can have as much enamel as you like. You will use the wire to make a tightly wound solenoid 20 cm long having the greatest possible magnetic field at the center and using a power supply that can deliver a current of 5 A . The solenoid can be wrapped with wire in one or more layers. (a) Should you make the wire long and thin or shorter and thick? Explain. (b) Should you make the radius of the solenoid small or large? Explain.
43. A single-turn square loop of wire, 2.00 cm on each edge, carries a clockwise current of 0.200 A . The loop is inside a solenoid, with the plane of the loop perpendicular to the magnetic field of the solenoid. The solenoid has

30.0 turns/cm and carries a clockwise current of 15.0 A. Find (a) the force on each side of the loop and (b) the torque acting on the loop.

44. A solenoid 10.0 cm in diameter and 75.0 cm long is made from copper wire of diameter 0.100 cm, with very thin insulation. The wire is wound onto a cardboard tube in a single layer, with adjacent turns touching each other. What power must be delivered to the solenoid if it is to produce a field of 8.00 mT at its center?
45. It is desired to construct a solenoid that will have a resistance of 5.00Ω (at 20.0°C) and produce a magnetic field of $4.00 \times 10^{-2} \text{ T}$ at its center when it carries a current of 4.00 A. The solenoid is to be constructed from copper wire having a diameter of 0.500 mm. If the radius of the solenoid is to be 1.00 cm, determine (a) the number of turns of wire needed and (b) the required length of the solenoid.

Section 30.5 Gauss's Law in Magnetism

46. Consider the hemispherical closed surface in Figure P30.46. The hemisphere is in a uniform magnetic field that makes an angle θ with the vertical. Calculate the magnetic flux through (a) the flat surface S_1 and (b) the hemispherical surface S_2 .

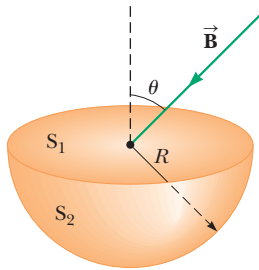


Figure P30.46

47. A cube of edge length $\ell = 2.50 \text{ cm}$ is positioned as shown in Figure P30.47. A uniform magnetic field given by $\vec{B} = (5\hat{i} + 4\hat{j} + 3\hat{k}) \text{ T}$ exists throughout the region. (a) Calculate the magnetic flux through the shaded face. (b) What is the total flux through the six faces?

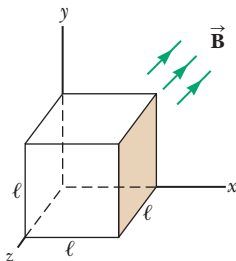


Figure P30.47

48. A solenoid of radius $r = 1.25 \text{ cm}$ and length $\ell = 30.0 \text{ cm}$ has 300 turns and carries 12.0 A. (a) Calculate the flux through the surface of a disk-shaped area of radius $R = 5.00 \text{ cm}$ that is positioned perpendicular to and centered on the axis of the solenoid as

shown in Figure P30.48a. (b) Figure P30.48b shows an enlarged end view of the same solenoid. Calculate the flux through the tan area, which is an annulus with an inner radius of $a = 0.400 \text{ cm}$ and an outer radius of $b = 0.800 \text{ cm}$.

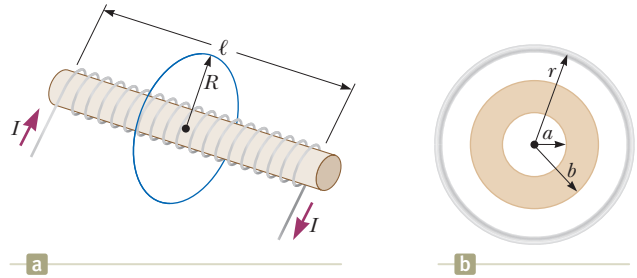


Figure P30.48

Section 30.6 Magnetism in Matter

49. The magnetic moment of the Earth is approximately $8.00 \times 10^{22} \text{ A}\cdot\text{m}^2$. Imagine that the planetary magnetic field were caused by the complete magnetization of a huge iron deposit with density $7\,900 \text{ kg/m}^3$ and approximately 8.50×10^{28} iron atoms/ m^3 . (a) How many unpaired electrons, each with a magnetic moment of $9.27 \times 10^{-24} \text{ A}\cdot\text{m}^2$, would participate? (b) At two unpaired electrons per iron atom, how many kilograms of iron would be present in the deposit?
50. At saturation, when nearly all the atoms have their magnetic moments aligned, the magnetic field is equal to the permeability constant μ_0 multiplied by the magnetic moment per unit volume. In a sample of iron, where the number density of atoms is approximately 8.50×10^{28} atoms/ m^3 , the magnetic field can reach 2.00 T. If each electron contributes a magnetic moment of $9.27 \times 10^{-24} \text{ A}\cdot\text{m}^2$ (1 Bohr magneton), how many electrons per atom contribute to the saturated field of iron?

Additional Problems

51. A 30.0-turn solenoid of length 6.00 cm produces a magnetic field of magnitude 2.00 mT at its center. Find the current in the solenoid.
52. A wire carries a 7.00-A current along the x axis, and another wire carries a 6.00-A current along the y axis, as shown in Figure P30.52. What is the magnetic field at point P , located at $x = 4.00 \text{ m}$, $y = 3.00 \text{ m}$?

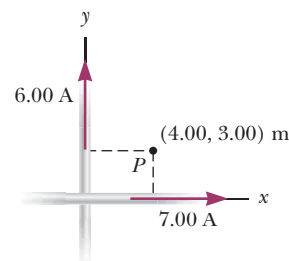


Figure P30.52

53. Suppose you install a compass on the center of a car's dashboard. (a) Assuming the dashboard is made mostly of plastic, compute an order-of-magnitude estimate for the magnetic field at this location produced by the current when you switch on the car's headlights. (b) How does this estimate compare with the Earth's magnetic field?
54. *Why is the following situation impossible?* The magnitude of the Earth's magnetic field at either pole is approximately 7.00×10^{-5} T. Suppose the field fades away to zero before its next reversal. Several scientists propose plans for artificially generating a replacement magnetic field to assist with devices that depend on the presence of the field. The plan that is selected is to lay a copper wire around the equator and supply it with a current that would generate a magnetic field of magnitude 7.00×10^{-5} T at the poles. (Ignore magnetization of any materials inside the Earth.) The plan is implemented and is highly successful.
55. **M** A nonconducting ring of radius 10.0 cm is uniformly charged with a total positive charge $10.0 \mu\text{C}$. The ring rotates at a constant angular speed 20.0 rad/s about an axis through its center, perpendicular to the plane of the ring. What is the magnitude of the magnetic field on the axis of the ring 5.00 cm from its center?
56. A nonconducting ring of radius R is uniformly charged with a total positive charge q . The ring rotates at a constant angular speed ω about an axis through its center, perpendicular to the plane of the ring. What is the magnitude of the magnetic field on the axis of the ring a distance $\frac{1}{2}R$ from its center?
57. A very long, thin strip of metal of width w carries a current I along its length as shown in Figure P30.57. The current is distributed uniformly across the width of the strip. Find the magnetic field at point P in the diagram. Point P is in the plane of the strip at distance b away from its edge.

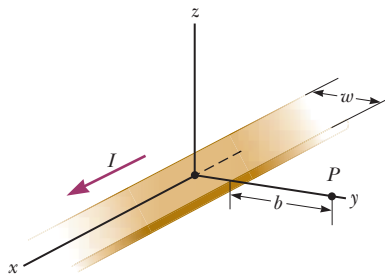


Figure P30.57

58. A circular coil of five turns and a diameter of 30.0 cm is oriented in a vertical plane with its axis perpendicular to the horizontal component of the Earth's magnetic field. A horizontal compass placed at the coil's center is made to deflect 45.0° from magnetic north by a current of 0.600 A in the coil. (a) What is the horizontal component of the Earth's magnetic field? (b) The current in the coil is switched off. A "dip

needle" is a magnetic compass mounted so that it can rotate in a vertical north-south plane. At this location, a dip needle makes an angle of 13.0° from the vertical. What is the total magnitude of the Earth's magnetic field at this location?

59. A very large parallel-plate capacitor has uniform charge per unit area $+\sigma$ on the upper plate and $-\sigma$ on the lower plate. The plates are horizontal, and both move horizontally with speed v to the right. (a) What is the magnetic field between the plates? (b) What is the magnetic field just above or just below the plates? (c) What are the magnitude and direction of the magnetic force per unit area on the upper plate? (d) At what extrapolated speed v will the magnetic force on a plate balance the electric force on the plate? *Suggestion:* Use Ampere's law and choose a path that closes between the plates of the capacitor.
60. Two circular coils of radius R , each with N turns, are perpendicular to a common axis. The coil centers are a distance R apart. Each coil carries a steady current I in the same direction as shown in Figure P30.60. (a) Show that the magnetic field on the axis at a distance x from the center of one coil is

$$B = \frac{N\mu_0 I R^2}{2} \left[\frac{1}{(R^2 + x^2)^{3/2}} + \frac{1}{(2R^2 + x^2 - 2Rx)^{3/2}} \right]$$

(b) Show that dB/dx and d^2B/dx^2 are both zero at the point midway between the coils. We may then conclude that the magnetic field in the region midway between the coils is uniform. Coils in this configuration are called *Helmholtz coils*.

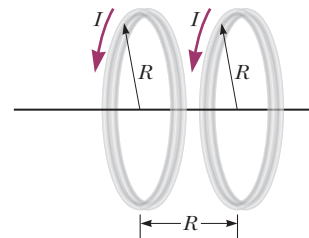


Figure P30.60 Problems 60 and 61.

61. Two identical, flat, circular coils of wire each have 100 turns and radius $R = 0.500$ m. The coils are arranged as a set of Helmholtz coils so that the separation distance between the coils is equal to the radius of the coils (see Fig. P30.60). Each coil carries current $I = 10.0$ A. Determine the magnitude of the magnetic field at a point on the common axis of the coils and halfway between them.
62. **AMT** Two circular loops are parallel, coaxial, and almost in contact, with their centers 1.00 mm apart (Fig. P30.62, page 932). Each loop is 10.0 cm in radius. The top loop carries a clockwise current of $I = 140$ A. The bottom loop carries a counterclockwise current of $I = 140$ A. (a) Calculate the magnetic force exerted by the bottom loop on the top loop. (b) Suppose a student thinks the first step in solving part (a) is to use Equation 30.7 to find the magnetic field created by one of the loops.

How would you argue for or against this idea? (c) The upper loop has a mass of 0.0210 kg . Calculate its acceleration, assuming the only forces acting on it are the force in part (a) and the gravitational force.

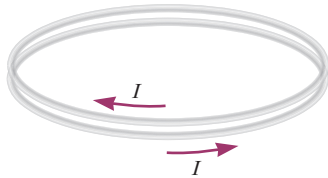


Figure P30.62

63. Two long, straight wires cross each other perpendicularly as shown in Figure P30.63. The wires are thin so that they are effectively in the same plane but do not touch. Find the magnetic field at a point 30.0 cm above the point of intersection of the wires along the z axis; that is, 30.0 cm out of the page, toward you.

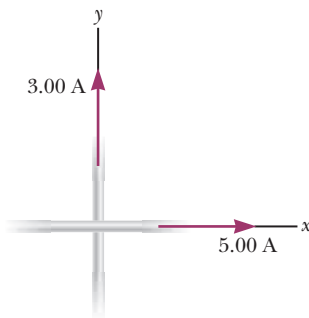


Figure P30.63

64. Two coplanar and concentric circular loops of wire carry currents of $I_1 = 5.00 \text{ A}$ and $I_2 = 3.00 \text{ A}$ in opposite directions as in Figure P30.64. If $r_1 = 12.0 \text{ cm}$ and $r_2 = 9.00 \text{ cm}$, what are (a) the magnitude and (b) the direction of the net magnetic field at the center of the two loops? (c) Let r_1 remain fixed at 12.0 cm and let r_2 be a variable. Determine the value of r_2 such that the net field at the center of the loops is zero.

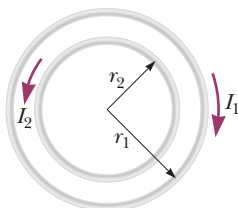


Figure P30.64

65. As seen in previous chapters, any object with electric charge, stationary or moving, other than the charged object that created the field, experiences a force in an electric field. Also, any object with electric charge, stationary or moving, can create an electric field (Chapter 23). Similarly, an electric current or a moving electric charge, other than the current or charge that created the field, experiences a force in a magnetic field (Chapter 29), and an electric current cre-

ates a magnetic field (Section 30.1). (a) To understand how a moving charge can also create a magnetic field, consider a particle with charge q moving with velocity \vec{v} . Define the position vector $\vec{r} = r\hat{r}$ leading from the particle to some location. Show that the magnetic field at that location is

$$\vec{B} = \frac{\mu_0}{4\pi} \frac{q\vec{v} \times \hat{r}}{r^2}$$

- (b) Find the magnitude of the magnetic field 1.00 mm to the side of a proton moving at $2.00 \times 10^7 \text{ m/s}$. (c) Find the magnetic force on a second proton at this point, moving with the same speed in the opposite direction. (d) Find the electric force on the second proton.

66. **Review.** Rail guns have been suggested for launching projectiles into space without chemical rockets. **AMT** **GP** A tabletop model rail gun (Fig. P30.66) consists of two long, parallel, horizontal rails $\ell = 3.50 \text{ cm}$ apart, bridged by a bar of mass $m = 3.00 \text{ g}$ that is free to slide without friction. The rails and bar have low electric resistance, and the current is limited to a constant $I = 24.0 \text{ A}$ by a power supply that is far to the left of the figure, so it has no magnetic effect on the bar. Figure P30.66 shows the bar at rest at the midpoint of the rails at the moment the current is established. We wish to find the speed with which the bar leaves the rails after being released from the midpoint of the rails. (a) Find the magnitude of the magnetic field at a distance of 1.75 cm from a single long wire carrying a current of 2.40 A . (b) For purposes of evaluating the magnetic field, model the rails as infinitely long. Using the result of part (a), find the magnitude and direction of the magnetic field at the midpoint of the bar. (c) Argue that this value of the field will be the same at all positions of the bar to the right of the midpoint of the rails. At other points along the bar, the field is in the same direction as at the midpoint, but is larger in magnitude. Assume the average effective magnetic field along the bar is five times larger than the field at the midpoint. With this assumption, find (d) the magnitude and (e) the direction of the force on the bar. (f) Is the bar properly modeled as a particle under constant acceleration? (g) Find the velocity of the bar after it has traveled a distance $d = 130 \text{ cm}$ to the end of the rails.

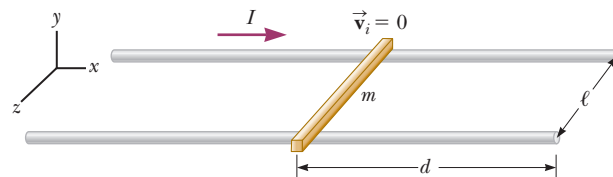


Figure P30.66

67. Fifty turns of insulated wire 0.100 cm in diameter are tightly wound to form a flat spiral. The spiral fills a disk surrounding a circle of radius 5.00 cm and extending to a radius 10.00 cm at the outer edge. Assume the wire carries a current I at the center of its cross section. Approximate each turn of wire as a circle. Then a loop

of current exists at radius 5.05 cm, another at 5.15 cm, and so on. Numerically calculate the magnetic field at the center of the coil.

68. An infinitely long, straight wire carrying a current I_1 is partially surrounded by a loop as shown in Figure P30.68. The loop has a length L and radius R , and it carries a current I_2 . The axis of the loop coincides with the wire. Calculate the magnetic force exerted on the loop.

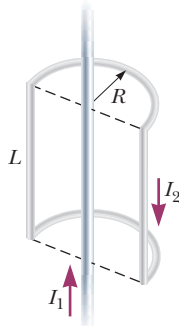


Figure P30.68

Challenge Problems

69. Consider a solenoid of length ℓ and radius a containing N closely spaced turns and carrying a steady current I . (a) In terms of these parameters, find the magnetic field at a point along the axis as a function of position x from the end of the solenoid. (b) Show that as ℓ becomes very long, B approaches $\mu_0 NI/2\ell$ at each end of the solenoid.
70. We have seen that a long solenoid produces a uniform magnetic field directed along the axis of a cylindrical region. To produce a uniform magnetic field directed parallel to a *diameter* of a cylindrical region, however, one can use the *saddle coils* illustrated in Figure P30.70. The loops are wrapped over a long, somewhat flattened tube. Figure P30.70a shows one wrapping of wire around the tube. This wrapping is continued in this manner until the visible side has many long sections of wire carrying current to the left in Figure P30.70a and the back side has many lengths carrying current to

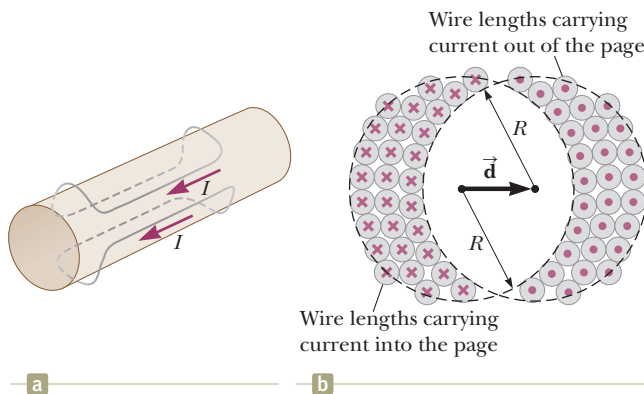


Figure P30.70

the right. The end view of the tube in Figure P30.70b shows these wires and the currents they carry. By wrapping the wires carefully, the distribution of wires can take the shape suggested in the end view such that the overall current distribution is approximately the superposition of two overlapping, circular cylinders of radius R (shown by the dashed lines) with uniformly distributed current, one toward you and one away from you. The current density J is the same for each cylinder. The center of one cylinder is described by a position vector \vec{d} relative to the center of the other cylinder. Prove that the magnetic field inside the hollow tube is $\mu_0 Jd/2$ downward. *Suggestion:* The use of vector methods simplifies the calculation.

71. A thin copper bar of length $\ell = 10.0$ cm is supported horizontally by two (nonmagnetic) contacts at its ends. The bar carries a current of $I_1 = 100$ A in the negative x direction as shown in Figure P30.71. At a distance $h = 0.500$ cm below one end of the bar, a long, straight wire carries a current of $I_2 = 200$ A in the positive z direction. Determine the magnetic force exerted on the bar.

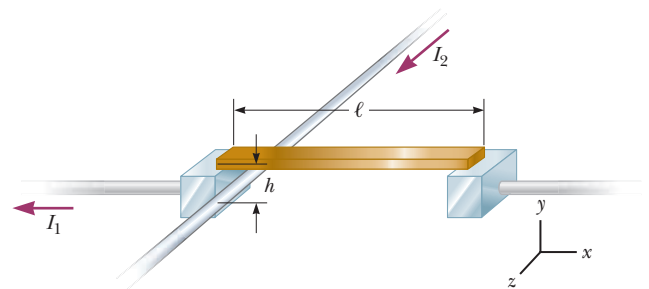


Figure P30.71

72. In Figure P30.72, both currents in the infinitely long wires are 8.00 A in the negative x direction. The wires are separated by the distance $2a = 6.00$ cm. (a) Sketch the magnetic field pattern in the yz plane. (b) What is the value of the magnetic field at the origin? (c) At $(y = 0, z \rightarrow \infty)$? (d) Find the magnetic field at points along the z axis as a function of z . (e) At what distance d along the positive z axis is the magnetic field a maximum? (f) What is this maximum value?

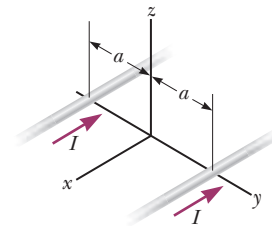


Figure P30.72

73. A wire carrying a current I is bent into the shape of an exponential spiral, $r = e^\theta$, from $\theta = 0$ to $\theta = 2\pi$ as suggested in Figure P30.73 (page 934). To complete a loop, the ends of the spiral are connected by a straight wire along the x axis. (a) The angle β between a radial

line and its tangent line at any point on a curve $r = f(\theta)$ is related to the function by

$$\tan \beta = \frac{r}{dr/d\theta}$$

Use this fact to show that $\beta = \pi/4$. (b) Find the magnetic field at the origin.

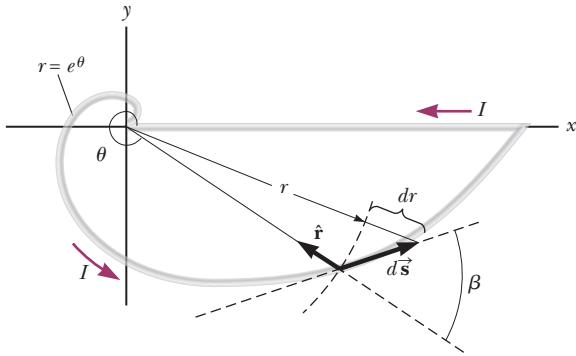


Figure P30.73

74. A sphere of radius R has a uniform volume charge density ρ . When the sphere rotates as a rigid object with angular speed ω about an axis through its center (Fig. P30.74), determine (a) the magnetic field at the center of the sphere and (b) the magnetic moment of the sphere.

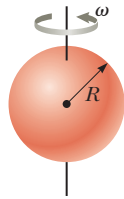


Figure P30.74

75. A long, cylindrical conductor of radius a has two cylindrical cavities each of diameter a through its entire length as shown in the end view of Figure P30.75. A current I is directed out of the page and is uniform through a cross section of the conducting material. Find the magnitude and direction of the magnetic field in terms of μ_0 , I , r , and a at (a) point P_1 and (b) point P_2 .

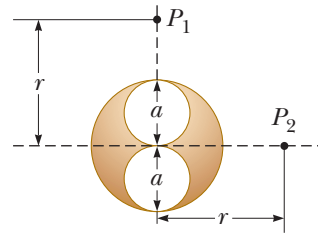


Figure P30.75

76. A wire is formed into the shape of a square of edge length L (Fig. P30.76). Show that when the current in the loop is I , the magnetic field at point P a distance x from the center of the square along its axis is

$$B = \frac{\mu_0 I L^2}{2\pi(x^2 + L^2/4)\sqrt{x^2 + L^2/2}}$$

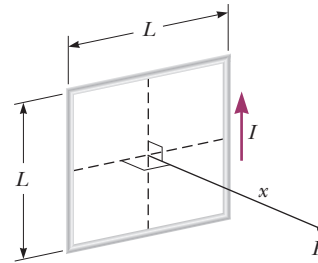


Figure P30.76

77. The magnitude of the force on a magnetic dipole $\vec{\mu}$ aligned with a nonuniform magnetic field in the positive x direction is $F_x = |\vec{\mu}| dB/dx$. Suppose two flat loops of wire each have radius R and carry a current I . (a) The loops are parallel to each other and share the same axis. They are separated by a variable distance $x \gg R$. Show that the magnetic force between them varies as $1/x^4$. (b) Find the magnitude of this force, taking $I = 10.0$ A, $R = 0.500$ cm, and $x = 5.00$ cm.

Faraday's Law

CHAPTER

31



31.1 Faraday's Law of Induction

31.2 Motional emf

31.3 Lenz's Law

31.4 Induced emf and Electric Fields

31.5 Generators and Motors

31.6 Eddy Currents

So far, our studies in electricity and magnetism have focused on the electric fields produced by stationary charges and the magnetic fields produced by moving charges. This chapter explores the effects produced by magnetic fields that vary in time.

Experiments conducted by Michael Faraday in England in 1831 and independently by Joseph Henry in the United States that same year showed that an emf can be induced in a circuit by a changing magnetic field. The results of these experiments led to a very basic and important law of electromagnetism known as *Faraday's law of induction*. An emf (and therefore a current as well) can be induced in various processes that involve a change in a magnetic flux.

31.1 Faraday's Law of Induction

To see how an emf can be induced by a changing magnetic field, consider the experimental results obtained when a loop of wire is connected to a sensitive ammeter as illustrated in Figure 31.1 (page 936). When a magnet is moved toward the loop, the reading on the ammeter changes from zero to a nonzero value, arbitrarily shown as negative in Figure 31.1a. When the magnet is brought to rest and held stationary relative to the loop (Fig. 31.1b), a reading of zero is observed. When the magnet is moved away from the loop, the reading on the ammeter changes to a positive value as shown in Figure 31.1c. Finally, when the magnet is held stationary and the loop

An artist's impression of the Skerries SeaGen Array, a tidal energy generator under development near the island of Anglesey, North Wales. When it is brought online, it will offer 10.5 MW of power from generators turned by tidal streams. The image shows the underwater blades that are driven by the tidal currents. The second blade system has been raised from the water for servicing. We will study generators in this chapter. (*Marine Current Turbines TM Ltd.*)



© iStockphoto.com/Steven Wynn Photography

Michael Faraday

British Physicist and Chemist
(1791–1867)

Faraday is often regarded as the greatest experimental scientist of the 1800s. His many contributions to the study of electricity include the invention of the electric motor, electric generator, and transformer as well as the discovery of electromagnetic induction and the laws of electrolysis. Greatly influenced by religion, he refused to work on the development of poison gas for the British military.

is moved either toward or away from it, the reading changes from zero. From these observations, we conclude that the loop detects that the magnet is moving relative to it and we relate this detection to a change in magnetic field. Therefore, it seems that a relationship exists between a current and a changing magnetic field.

These results are quite remarkable because a current is set up even though no batteries are present in the circuit! We call such a current an *induced current* and say that it is produced by an *induced emf*.

Now let's describe an experiment conducted by Faraday and illustrated in Figure 31.2. A primary coil is wrapped around an iron ring and connected to a switch and a battery. A current in the coil produces a magnetic field when the switch is closed. A secondary coil also is wrapped around the ring and is connected to a sensitive ammeter. No battery is present in the secondary circuit, and the secondary coil is not electrically connected to the primary coil. Any current detected in the secondary circuit must be induced by some external agent.

Initially, you might guess that no current is ever detected in the secondary circuit. Something quite amazing happens when the switch in the primary circuit is either opened or thrown closed, however. At the instant the switch is closed, the ammeter reading changes from zero momentarily and then returns to zero. At the instant the switch is opened, the ammeter changes to a reading with the opposite sign and again returns to zero. Finally, the ammeter reads zero when there is either a steady current or no current in the primary circuit. To understand what happens in this experiment, note that when the switch is closed, the current in the primary circuit produces a magnetic field that penetrates the secondary circuit. Furthermore, when the switch is thrown closed, the magnetic field produced by the current in the primary circuit changes from zero to some value over some finite time, and this changing field induces a current in the secondary circuit. Notice that no current is induced in the secondary coil even when a steady current exists in the primary coil. It is a *change* in the current in the primary coil that induces a current in the secondary coil, not just the *existence* of a current.

As a result of these observations, Faraday concluded that an electric current can be induced in a loop by a changing magnetic field. The induced current exists only while the magnetic field through the loop is changing. Once the magnetic field reaches a steady value, the current in the loop disappears. In effect, the loop behaves as though a source of emf were connected to it for a short time. It is customary to say that an induced emf is produced in the loop by the changing magnetic field.

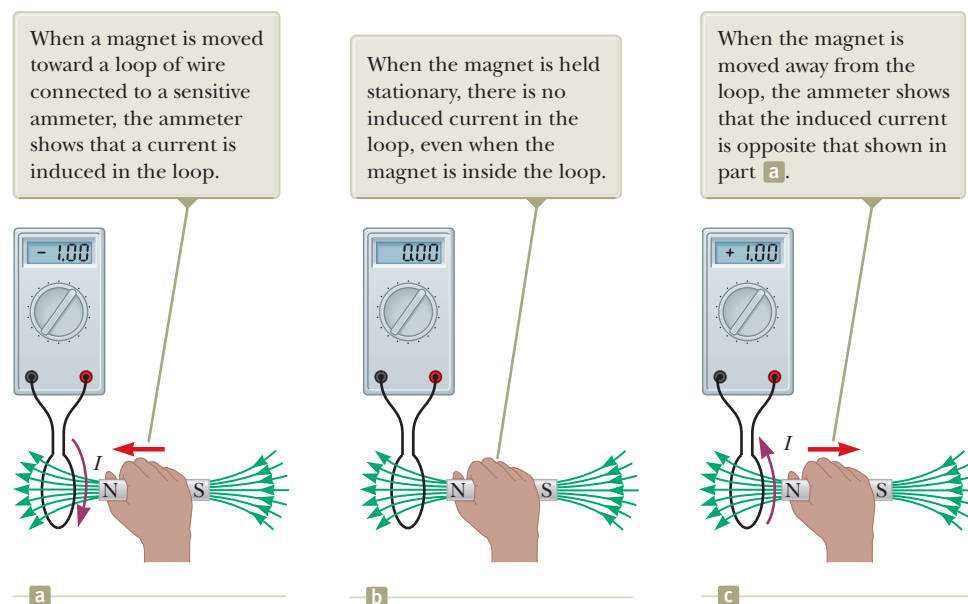


Figure 31.1 A simple experiment showing that a current is induced in a loop when a magnet is moved toward or away from the loop.

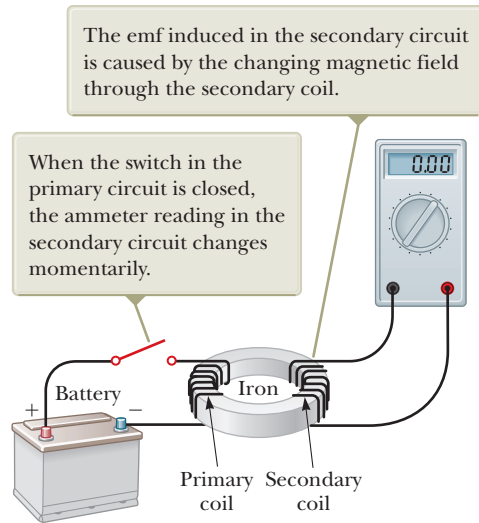


Figure 31.2 Faraday's experiment.

The experiments shown in Figures 31.1 and 31.2 have one thing in common: in each case, an emf is induced in a loop when the magnetic flux through the loop changes with time. In general, this emf is directly proportional to the time rate of change of the magnetic flux through the loop. This statement can be written mathematically as **Faraday's law of induction**:

$$\mathcal{E} = -\frac{d\Phi_B}{dt} \quad (31.1)$$

◀ Faraday's law of induction

where $\Phi_B = \int \vec{\mathbf{B}} \cdot d\vec{\mathbf{A}}$ is the magnetic flux through the loop. (See Section 30.5.)

If a coil consists of N loops with the same area and Φ_B is the magnetic flux through one loop, an emf is induced in every loop. The loops are in series, so their emfs add; therefore, the total induced emf in the coil is given by

$$\mathcal{E} = -N \frac{d\Phi_B}{dt} \quad (31.2)$$

The negative sign in Equations 31.1 and 31.2 is of important physical significance and will be discussed in Section 31.3.

Suppose a loop enclosing an area A lies in a uniform magnetic field $\vec{\mathbf{B}}$ as in Figure 31.3. The magnetic flux through the loop is equal to $BA \cos \theta$, where θ is the angle between the magnetic field and the normal to the loop; hence, the induced emf can be expressed as

$$\mathcal{E} = -\frac{d}{dt}(BA \cos \theta) \quad (31.3)$$

From this expression, we see that an emf can be induced in the circuit in several ways:

- The magnitude of $\vec{\mathbf{B}}$ can change with time.
- The area enclosed by the loop can change with time.
- The angle θ between $\vec{\mathbf{B}}$ and the normal to the loop can change with time.
- Any combination of the above can occur.

Quick Quiz 31.1 A circular loop of wire is held in a uniform magnetic field, with the plane of the loop perpendicular to the field lines. Which of the following will *not* cause a current to be induced in the loop? (a) crushing the loop (b) rotating the loop about an axis perpendicular to the field lines (c) keeping the orientation of the loop fixed and moving it along the field lines (d) pulling the loop out of the field

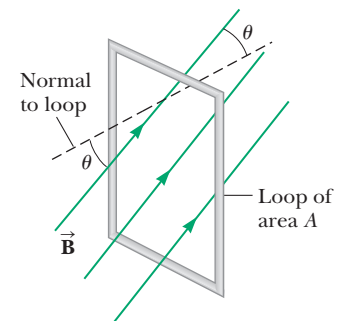


Figure 31.3 A conducting loop that encloses an area A in the presence of a uniform magnetic field $\vec{\mathbf{B}}$. The angle between $\vec{\mathbf{B}}$ and the normal to the loop is θ .

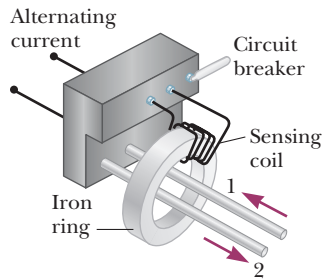


Figure 31.4 Essential components of a ground fault circuit interrupter.

Some Applications of Faraday's Law

The ground fault circuit interrupter (GFCI) is an interesting safety device that protects users of electrical appliances against electric shock. Its operation makes use of Faraday's law. In the GFCI shown in Figure 31.4, wire 1 leads from the wall outlet to the appliance to be protected and wire 2 leads from the appliance back to the wall outlet. An iron ring surrounds the two wires, and a sensing coil is wrapped around part of the ring. Because the currents in the wires are in opposite directions and of equal magnitude, there is zero net current flowing through the ring and the net magnetic flux through the sensing coil is zero. Now suppose the return current in wire 2 changes so that the two currents are not equal in magnitude. (That can happen if, for example, the appliance becomes wet, enabling current to leak to ground.) Then the net current through the ring is not zero and the magnetic flux through the sensing coil is no longer zero. Because household current is alternating (meaning that its direction keeps reversing), the magnetic flux through the sensing coil changes with time, inducing an emf in the coil. This induced emf is used to trigger a circuit breaker, which stops the current before it is able to reach a harmful level.

Another interesting application of Faraday's law is the production of sound in an electric guitar. The coil in this case, called the *pickup coil*, is placed near the vibrating guitar string, which is made of a metal that can be magnetized. A permanent magnet inside the coil magnetizes the portion of the string nearest the coil (Fig. 31.5a). When the string vibrates at some frequency, its magnetized segment produces a changing magnetic flux through the coil. The changing flux induces an emf in the coil that is fed to an amplifier. The output of the amplifier is sent to the loudspeakers, which produce the sound waves we hear.

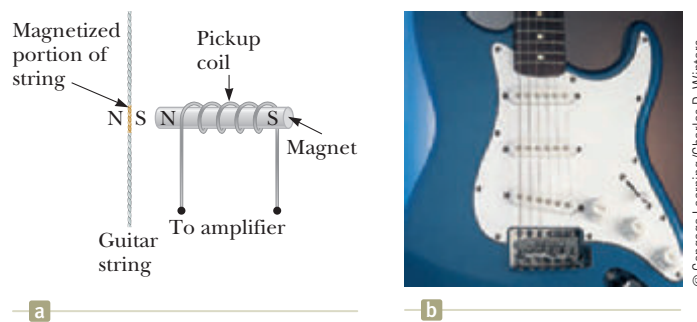


Figure 31.5 (a) In an electric guitar, a vibrating magnetized string induces an emf in a pickup coil. (b) The pickups (the circles beneath the metallic strings) of this electric guitar detect the vibrations of the strings and send this information through an amplifier and into speakers. (A switch on the guitar allows the musician to select which set of six pickups is used.)

Example 31.1 Inducing an emf in a Coil

A coil consists of 200 turns of wire. Each turn is a square of side $d = 18$ cm, and a uniform magnetic field directed perpendicular to the plane of the coil is turned on. If the field changes linearly from 0 to 0.50 T in 0.80 s, what is the magnitude of the induced emf in the coil while the field is changing?

SOLUTION

Conceptualize From the description in the problem, imagine magnetic field lines passing through the coil. Because the magnetic field is changing in magnitude, an emf is induced in the coil.

Categorize We will evaluate the emf using Faraday's law from this section, so we categorize this example as a substitution problem.

31.1 continued

Evaluate Equation 31.2 for the situation described here, noting that the magnetic field changes linearly with time:

$$|\mathcal{E}| = N \frac{\Delta\Phi_B}{\Delta t} = N \frac{\Delta(BA)}{\Delta t} = NA \frac{\Delta B}{\Delta t} = Nd^2 \frac{B_f - B_i}{\Delta t}$$

Substitute numerical values:

$$|\mathcal{E}| = (200)(0.18 \text{ m})^2 \frac{(0.50 \text{ T} - 0)}{0.80 \text{ s}} = 4.0 \text{ V}$$

WHAT IF? What if you were asked to find the magnitude of the induced current in the coil while the field is changing? Can you answer that question?

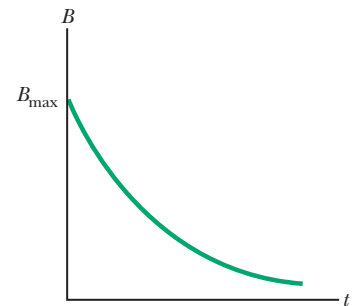
Answer If the ends of the coil are not connected to a circuit, the answer to this question is easy: the current is zero! (Charges move within the wire of the coil, but they cannot move into or out of the ends of the coil.) For a steady current to exist, the ends of the coil must be connected to an external circuit. Let's assume the coil is connected to a circuit and the total resistance of the coil and the circuit is 2.0Ω . Then, the magnitude of the induced current in the coil is

$$I = \frac{|\mathcal{E}|}{R} = \frac{4.0 \text{ V}}{2.0 \Omega} = 2.0 \text{ A}$$

Example 31.2 An Exponentially Decaying Magnetic Field

A loop of wire enclosing an area A is placed in a region where the magnetic field is perpendicular to the plane of the loop. The magnitude of \vec{B} varies in time according to the expression $B = B_{\max} e^{-at}$, where a is some constant. That is, at $t = 0$, the field is B_{\max} , and for $t > 0$, the field decreases exponentially (Fig. 31.6). Find the induced emf in the loop as a function of time.

Figure 31.6 (Example 31.2) Exponential decrease in the magnitude of the magnetic field through a loop with time. The induced emf and induced current in a conducting path attached to the loop vary with time in the same way.



SOLUTION

Conceptualize The physical situation is similar to that in Example 31.1 except for two things: there is only one loop, and the field varies exponentially with time rather than linearly.

Categorize We will evaluate the emf using Faraday's law from this section, so we categorize this example as a substitution problem.

Evaluate Equation 31.1 for the situation described here:

$$\mathcal{E} = -\frac{d\Phi_B}{dt} = -\frac{d}{dt}(AB_{\max} e^{-at}) = -AB_{\max} \frac{d}{dt} e^{-at} = aAB_{\max} e^{-at}$$

This expression indicates that the induced emf decays exponentially in time. The maximum emf occurs at $t = 0$, where $\mathcal{E}_{\max} = aAB_{\max}$. The plot of \mathcal{E} versus t is similar to the B -versus- t curve shown in Figure 31.6.

31.2 Motional emf

In Examples 31.1 and 31.2, we considered cases in which an emf is induced in a stationary circuit placed in a magnetic field when the field changes with time. In this section, we describe **motional emf**, the emf induced in a conductor moving through a constant magnetic field.

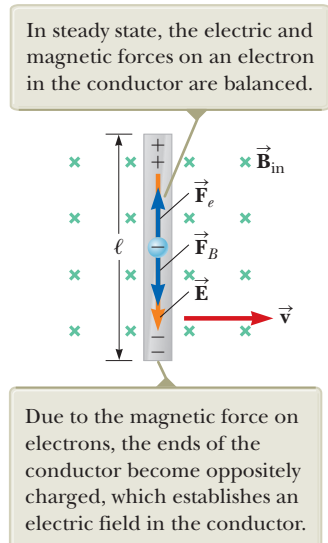


Figure 31.7 A straight electrical conductor of length ℓ moving with a velocity \vec{v} through a uniform magnetic field \vec{B} directed perpendicular to \vec{v} .

The straight conductor of length ℓ shown in Figure 31.7 is moving through a uniform magnetic field directed into the page. For simplicity, let's assume the conductor is moving in a direction perpendicular to the field with constant velocity under the influence of some external agent. From the magnetic version of the particle in a field model, the electrons in the conductor experience a force $\vec{F}_B = q\vec{v} \times \vec{B}$ (Eq. 29.1) that is directed along the length ℓ , perpendicular to both \vec{v} and \vec{B} . Under the influence of this force, the electrons move to the lower end of the conductor and accumulate there, leaving a net positive charge at the upper end. As a result of this charge separation, an electric field \vec{E} is produced inside the conductor. Therefore, the electrons are also described by the electric version of the particle in a field model. The charges accumulate at both ends until the downward magnetic force qvB on charges remaining in the conductor is balanced by the upward electric force qE . The electrons are then described by the particle in equilibrium model. The condition for equilibrium requires that the forces on the electrons balance:

$$qE = qvB \quad \text{or} \quad E = vB$$

The magnitude of the electric field produced in the conductor is related to the potential difference across the ends of the conductor according to the relationship $\Delta V = E\ell$ (Eq. 25.6). Therefore, for the equilibrium condition,

$$\Delta V = E\ell = B\ell v \tag{31.4}$$

where the upper end of the conductor in Figure 31.7 is at a higher electric potential than the lower end. Therefore, a potential difference is maintained between the ends of the conductor as long as the conductor continues to move through the uniform magnetic field. If the direction of the motion is reversed, the polarity of the potential difference is also reversed.

A more interesting situation occurs when the moving conductor is part of a closed conducting path. This situation is particularly useful for illustrating how a changing magnetic flux causes an induced current in a closed circuit. Consider a circuit consisting of a conducting bar of length ℓ sliding along two fixed, parallel conducting rails as shown in Figure 31.8a. For simplicity, let's assume the bar has zero resistance and the stationary part of the circuit has a resistance R . A uniform and constant magnetic field \vec{B} is applied perpendicular to the plane of the circuit. As the bar is pulled to the right with a velocity \vec{v} under the influence of an applied force \vec{F}_{app} , free charges in the bar are moving particles in a magnetic field that experience a magnetic force directed along the length of the bar. This force sets up an induced current because the charges are free to move in the closed conducting path. In this case, the rate of change of magnetic flux through the circuit and the corresponding

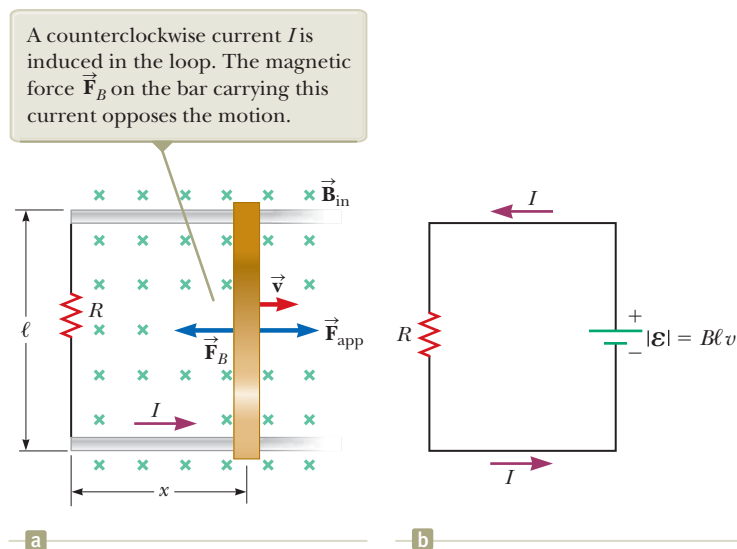


Figure 31.8 (a) A conducting bar sliding with a velocity \vec{v} along two conducting rails under the action of an applied force \vec{F}_{app} . (b) The equivalent circuit diagram for the setup shown in (a).

induced motional emf across the moving bar are proportional to the change in area of the circuit.

Because the area enclosed by the circuit at any instant is ℓx , where x is the position of the bar, the magnetic flux through that area is

$$\Phi_B = B\ell x$$

Using Faraday's law and noting that x changes with time at a rate $dx/dt = v$, we find that the induced motional emf is

$$\begin{aligned}\mathcal{E} &= -\frac{d\Phi_B}{dt} = -\frac{d}{dt}(B\ell x) = -B\ell \frac{dx}{dt} \\ \mathcal{E} &= -B\ell v\end{aligned}\quad (31.5) \quad \leftarrow \text{Motional emf}$$

Because the resistance of the circuit is R , the magnitude of the induced current is

$$I = \frac{|\mathcal{E}|}{R} = \frac{B\ell v}{R}\quad (31.6)$$

The equivalent circuit diagram for this example is shown in Figure 31.8b.

Let's examine the system using energy considerations. Because no battery is in the circuit, you might wonder about the origin of the induced current and the energy delivered to the resistor. We can understand the source of this current and energy by noting that the applied force does work on the conducting bar. Therefore, we model the circuit as a nonisolated system. The movement of the bar through the field causes charges to move along the bar with some average drift velocity; hence, a current is established. The change in energy in the system during some time interval must be equal to the transfer of energy into the system by work, consistent with the general principle of conservation of energy described by Equation 8.2. The appropriate reduction of Equation 8.2 is $W = \Delta E_{\text{int}}$, because the input energy appears as internal energy in the resistor.

Let's verify this equality mathematically. As the bar moves through the uniform magnetic field $\vec{\mathbf{B}}$, it experiences a magnetic force $\vec{\mathbf{F}}_B$ of magnitude $I\ell B$ (see Section 29.4). Because the bar moves with constant velocity, it is modeled as a particle in equilibrium and the magnetic force must be equal in magnitude and opposite in direction to the applied force, or to the left in Figure 31.8a. (If $\vec{\mathbf{F}}_B$ acted in the direction of motion, it would cause the bar to accelerate, violating the principle of conservation of energy.) Using Equation 31.6 and $F_{\text{app}} = F_B = I\ell B$, the power delivered by the applied force is

$$P = F_{\text{app}}v = (I\ell B)v = \frac{B^2\ell^2v^2}{R} = \frac{\mathcal{E}^2}{R}\quad (31.7)$$

From Equation 27.22, we see that this power input is equal to the rate at which energy is delivered to the resistor, consistent with the principle of conservation of energy.

- Quick Quiz 31.2** In Figure 31.8a, a given applied force of magnitude F_{app} results in a constant speed v and a power input P . Imagine that the force is increased so that the constant speed of the bar is doubled to $2v$. Under these conditions, what are the new force and the new power input? (a) $2F$ and $2P$ (b) $4F$ and $2P$ (c) $2F$ and $4P$ (d) $4F$ and $4P$

Example 31.3 Magnetic Force Acting on a Sliding Bar AM

The conducting bar illustrated in Figure 31.9 (page 942) moves on two frictionless, parallel rails in the presence of a uniform magnetic field directed into the page. The bar has mass m , and its length is ℓ . The bar is given an initial velocity $\vec{\mathbf{v}}_i$ to the right and is released at $t = 0$.

continued

31.3 continued

(A) Using Newton's laws, find the velocity of the bar as a function of time.

SOLUTION

Conceptualize As the bar slides to the right in Figure 31.9, a counterclockwise current is established in the circuit consisting of the bar, the rails, and the resistor. The upward current in the bar results in a magnetic force to the left on the bar as shown in the figure. Therefore, the bar must slow down, so our mathematical solution should demonstrate that.

Categorize The text already categorizes this problem as one that uses Newton's laws. We model the bar as a *particle under a net force*.

Analyze From Equation 29.10, the magnetic force is $F_B = -I\ell B$, where the negative sign indicates that the force is to the left. The magnetic force is the *only* horizontal force acting on the bar.

Using the particle under a net force model, apply Newton's second law to the bar in the horizontal direction:

$$F_x = ma \rightarrow -I\ell B = m \frac{dv}{dt}$$

Substitute $I = B\ell v/R$ from Equation 31.6:

$$m \frac{dv}{dt} = -\frac{B^2\ell^2}{R} v$$

Rearrange the equation so that all occurrences of the variable v are on the left and those of t are on the right:

$$\frac{dv}{v} = -\left(\frac{B^2\ell^2}{mR}\right) dt$$

Integrate this equation using the initial condition that $v = v_i$ at $t = 0$ and noting that $(B^2\ell^2/mR)$ is a constant:

$$\int_{v_i}^v \frac{dv}{v} = -\frac{B^2\ell^2}{mR} \int_0^t dt$$

$$\ln\left(\frac{v}{v_i}\right) = -\left(\frac{B^2\ell^2}{mR}\right)t$$

Define the constant $\tau = mR/B^2\ell^2$ and solve for the velocity:

$$(1) \quad v = v_i e^{-t/\tau}$$

Finalize This expression for v indicates that the velocity of the bar decreases with time under the action of the magnetic force as expected from our conceptualization of the problem.

(B) Show that the same result is found by using an energy approach.

SOLUTION

Categorize The text of this part of the problem tells us to use an energy approach for the same situation. We model the entire circuit in Figure 31.9 as an *isolated system*.

Analyze Consider the sliding bar as one system component possessing kinetic energy, which decreases because energy is transferring *out* of the bar by electrical transmission through the rails. The resistor is another system component possessing internal energy, which rises because energy is transferring *into* the resistor. Because energy is not leaving the system, the rate of energy transfer out of the bar equals the rate of energy transfer into the resistor.

Equate the power entering the resistor to that leaving the bar:

$$P_{\text{resistor}} = -P_{\text{bar}}$$

Substitute for the electrical power delivered to the resistor and the time rate of change of kinetic energy for the bar:

$$I^2 R = -\frac{d}{dt} \left(\frac{1}{2} m v^2 \right)$$

Use Equation 31.6 for the current and carry out the derivative:

$$\frac{B^2\ell^2 v^2}{R} = -m v \frac{dv}{dt}$$

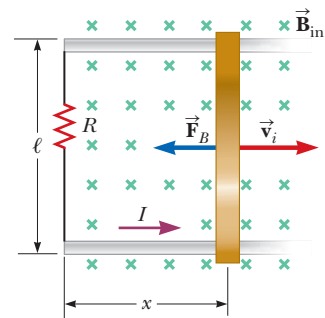


Figure 31.9 (Example 31.3) A conducting bar of length ℓ on two fixed conducting rails is given an initial velocity \vec{v}_i to the right.

31.3 continued

Rearrange terms:

$$\frac{dv}{v} = -\left(\frac{B^2 \ell^2}{mR}\right) dt$$

Finalize This result is the same expression to be integrated that we found in part (A).

WHAT IF? Suppose you wished to increase the distance through which the bar moves between the time it is initially projected and the time it essentially comes to rest. You can do so by changing one of three variables— v_i , R , or B —by a factor of 2 or $\frac{1}{2}$. Which variable should you change to maximize the distance, and would you double it or halve it?

Answer Increasing v_i would make the bar move farther. Increasing R would decrease the current and therefore the magnetic force, making the bar move farther. Decreasing B would decrease the magnetic force and make the bar move farther. Which method is most effective, though?

Use Equation (1) to find the distance the bar moves by integration:

$$\begin{aligned} v &= \frac{dx}{dt} = v_i e^{-t/\tau} \\ x &= \int_0^\infty v_i e^{-t/\tau} dt = -v_i \tau e^{-t/\tau} \Big|_0^\infty \\ &= -v_i \tau (0 - 1) = v_i \tau = v_i \left(\frac{mR}{B^2 \ell^2} \right) \end{aligned}$$

This expression shows that doubling v_i or R will double the distance. Changing B by a factor of $\frac{1}{2}$, however, causes the distance to be four times as great!

Example 31.4 Motional emf Induced in a Rotating Bar

A conducting bar of length ℓ rotates with a constant angular speed ω about a pivot at one end. A uniform magnetic field $\vec{\mathbf{B}}$ is directed perpendicular to the plane of rotation as shown in Figure 31.10. Find the motional emf induced between the ends of the bar.

SOLUTION

Conceptualize The rotating bar is different in nature from the sliding bar in Figure 31.8. Consider a small segment of the bar, however. It is a short length of conductor moving in a magnetic field and has an emf generated in it like the sliding bar. By thinking of each small segment as a source of emf, we see that all segments are in series and the emfs add.

Categorize Based on the conceptualization of the problem, we approach this example as we did in the discussion leading to Equation 31.5, with the added feature that the short segments of the bar are traveling in circular paths.

Analyze Evaluate the magnitude of the emf induced in a segment of the bar of length dr having a velocity $\vec{\mathbf{v}}$ from Equation 31.5:

$$d\mathcal{E} = Bv dr$$

Find the total emf between the ends of the bar by adding the emfs induced across all segments:

$$\mathcal{E} = \int Bv dr$$

The tangential speed v of an element is related to the angular speed ω through the relationship $v = r\omega$ (Eq. 10.10); use that fact and integrate:

$$\mathcal{E} = B \int v dr = B\omega \int_0^\ell r dr = \frac{1}{2} B\omega \ell^2$$

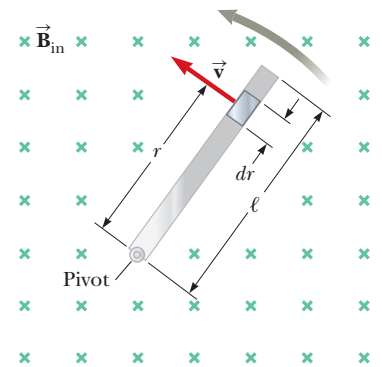


Figure 31.10 (Example 31.4) A conducting bar rotating around a pivot at one end in a uniform magnetic field that is perpendicular to the plane of rotation. A motional emf is induced between the ends of the bar.

continued

▶ 31.4 continued

Finalize In Equation 31.5 for a sliding bar, we can increase \mathcal{E} by increasing B , ℓ , or v . Increasing any one of these variables by a given factor increases \mathcal{E} by the same factor. Therefore, you would choose whichever of these three variables is most convenient to increase. For the rotating rod, however, there is an advantage to increasing the length of the rod to raise the emf because ℓ is squared. Doubling the length gives four times the emf, whereas doubling the angular speed only doubles the emf.

WHAT IF? Suppose, after reading through this example, you come up with a brilliant idea. A Ferris wheel has radial metallic spokes between the hub and the circular rim. These spokes move in the magnetic field of the Earth, so each spoke acts like the bar in Figure 31.10. You plan to use the emf generated by the rotation of the Ferris wheel to power the lightbulbs on the wheel. Will this idea work?

Answer Let's estimate the emf that is generated in this situation. We know the magnitude of the magnetic field of the Earth from Table 29.1: $B = 0.5 \times 10^{-4}$ T. A typical spoke on a Ferris wheel might have a length on the order of 10 m. Suppose the period of rotation is on the order of 10 s.

Determine the angular speed of the spoke:

$$\omega = \frac{2\pi}{T} = \frac{2\pi}{10 \text{ s}} = 0.63 \text{ s}^{-1} \sim 1 \text{ s}^{-1}$$

Assume the magnetic field lines of the Earth are horizontal at the location of the Ferris wheel and perpendicular to the spokes. Find the emf generated:

$$\begin{aligned}\mathcal{E} &= \frac{1}{2}B\omega\ell^2 = \frac{1}{2}(0.5 \times 10^{-4} \text{ T})(1 \text{ s}^{-1})(10 \text{ m})^2 \\ &= 2.5 \times 10^{-3} \text{ V} \sim 1 \text{ mV}\end{aligned}$$

This value is a tiny emf, far smaller than that required to operate lightbulbs.

An additional difficulty is related to energy. Even assuming you could find lightbulbs that operate using a potential difference on the order of millivolts, a spoke must be part of a circuit to provide a voltage to the lightbulbs. Consequently, the spoke must carry a current. Because this current-carrying spoke is in a magnetic field, a magnetic force is exerted on the spoke in the direction opposite its direction of motion. As a result, the motor of the Ferris wheel must supply more energy to perform work against this magnetic drag force. The motor must ultimately provide the energy that is operating the lightbulbs, and you have not gained anything for free!

31.3 Lenz's Law

Faraday's law (Eq. 31.1) indicates that the induced emf and the change in flux have opposite algebraic signs. This feature has a very real physical interpretation that has come to be known as **Lenz's law**:¹

Lenz's law ▶

The induced current in a loop is in the direction that creates a magnetic field that opposes the change in magnetic flux through the area enclosed by the loop.

That is, the induced current tends to keep the original magnetic flux through the loop from changing. We shall show that this law is a consequence of the law of conservation of energy.

To understand Lenz's law, let's return to the example of a bar moving to the right on two parallel rails in the presence of a uniform magnetic field (the *external* magnetic field, shown by the green crosses in Fig. 31.11a). As the bar moves to the right, the magnetic flux through the area enclosed by the circuit increases with time because the area increases. Lenz's law states that the induced current must be directed so that the magnetic field it produces opposes the change in the external magnetic flux. Because the magnetic flux due to an external field directed into the page is increasing, the induced current—if it is to oppose this change—must

¹Developed by German physicist Heinrich Lenz (1804–1865).

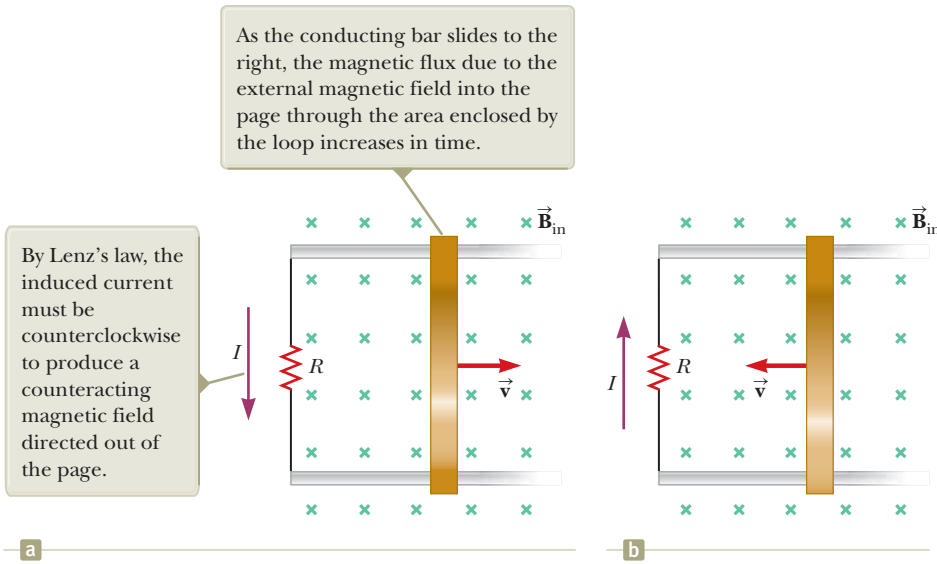


Figure 31.11 (a) Lenz's law can be used to determine the direction of the induced current. (b) When the bar moves to the left, the induced current must be clockwise. Why?

produce a field directed out of the page. Hence, the induced current must be directed counterclockwise when the bar moves to the right. (Use the right-hand rule to verify this direction.) If the bar is moving to the left as in Figure 31.11b, the external magnetic flux through the area enclosed by the loop decreases with time. Because the field is directed into the page, the direction of the induced current must be clockwise if it is to produce a field that also is directed into the page. In either case, the induced current attempts to maintain the original flux through the area enclosed by the current loop.

Let's examine this situation using energy considerations. Suppose the bar is given a slight push to the right. In the preceding analysis, we found that this motion sets up a counterclockwise current in the loop. What happens if we assume the current is clockwise such that the direction of the magnetic force exerted on the bar is to the right? This force would accelerate the rod and increase its velocity, which in turn would cause the area enclosed by the loop to increase more rapidly. The result would be an increase in the induced current, which would cause an increase in the force, which would produce an increase in the current, and so on. In effect, the system would acquire energy with no input of energy. This behavior is clearly inconsistent with all experience and violates the law of conservation of energy. Therefore, the current must be counterclockwise.

- Quick Quiz 31.3** Figure 31.12 shows a circular loop of wire falling toward a wire carrying a current to the left. What is the direction of the induced current in the loop of wire? (a) clockwise (b) counterclockwise (c) zero (d) impossible to determine

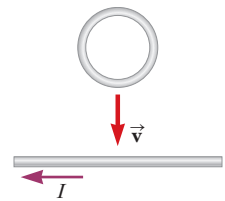


Figure 31.12 (Quick Quiz 31.3)

Conceptual Example 31.5 Application of Lenz's Law

A magnet is placed near a metal loop as shown in Figure 31.13a (page 946).

- (A)** Find the direction of the induced current in the loop when the magnet is pushed toward the loop.

SOLUTION

As the magnet moves to the right toward the loop, the external magnetic flux through the loop increases with time. To counteract this increase in flux due to a field toward the right, the induced current produces its own magnetic field to the left as illustrated in Figure 31.13b; hence, the induced current is in the direction shown. Knowing that like

continued

31.5 continued

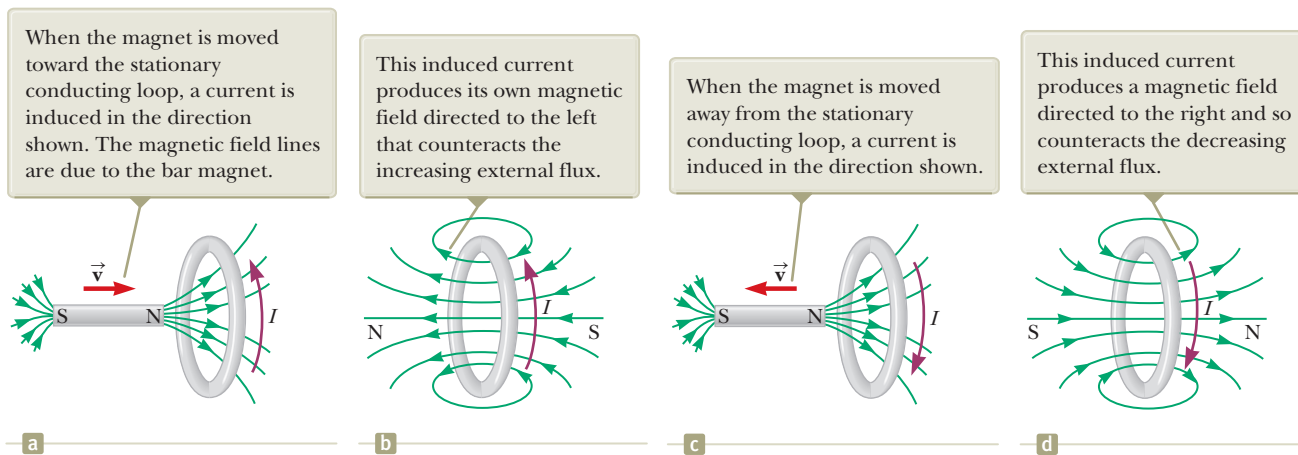


Figure 31.13 (Conceptual Example 31.5) A moving bar magnet induces a current in a conducting loop.

magnetic poles repel each other, we conclude that the left face of the current loop acts like a north pole and the right face acts like a south pole.

(B) Find the direction of the induced current in the loop when the magnet is pulled away from the loop.

SOLUTION

If the magnet moves to the left as in Figure 31.13c, its flux through the area enclosed by the loop decreases in time. Now the induced current in the loop is in the direction shown in Figure 31.13d because this current direction produces a magnetic field in the same direction as the external field. In this case, the left face of the loop is a south pole and the right face is a north pole.

Conceptual Example 31.6 A Loop Moving Through a Magnetic Field

A rectangular metallic loop of dimensions ℓ and w and resistance R moves with constant speed v to the right as in Figure 31.14a. The loop passes through a uniform magnetic field \vec{B} directed into the page and extending a distance $3w$ along the x axis. Define x as the position of the right side of the loop along the x axis.

(A) Plot the magnetic flux through the area enclosed by the loop as a function of x .

SOLUTION

Figure 31.14b shows the flux through the area enclosed by the loop as a function of x . Before the loop enters the field, the flux through the loop is zero. As the loop enters the field, the flux increases linearly with position until the left edge of the loop is just inside the field. Finally, the flux through the loop decreases linearly to zero as the loop leaves the field.

(B) Plot the induced motional emf in the loop as a function of x .

SOLUTION

Before the loop enters the field, no motional emf is induced in it because no field is present (Fig. 31.14c). As the right side of the loop enters the field, the magnetic flux directed into the page increases. Hence, according to Lenz's law, the induced current is counterclockwise because it must produce its own magnetic field directed out of the page. The motional emf $-B\ell v$ (from Eq. 31.5) arises from the magnetic force experienced by charges in the right side of the loop. When the loop is entirely in the field, the change in magnetic flux through the loop is zero; hence, the motional emf vanishes. That happens because once the left side of the loop enters the field, the motional emf induced in it

31.6 continued

cancels the motional emf present in the right side of the loop. As the right side of the loop leaves the field, the flux through the loop begins to decrease, a clockwise current is induced, and the induced emf is $B\ell v$. As soon as the left side leaves the field, the emf decreases to zero.

(C) Plot the external applied force necessary to counter the magnetic force and keep v constant as a function of x .

SOLUTION

The external force that must be applied to the loop to maintain this motion is plotted in Figure 31.14d. Before the loop enters the field, no magnetic force acts on it; hence, the applied force must be zero if v is constant. When the right side of the loop enters the field, the applied force necessary to maintain constant speed must be equal in magnitude and opposite in direction to the magnetic force exerted on that side, so that the loop is a particle in equilibrium. When the loop is entirely in the field, the flux through the loop is not changing with time. Hence, the net emf induced in the loop is zero and the current also is zero. Therefore, no external force is needed to maintain the motion. Finally, as the right side leaves the field, the applied force must be equal in magnitude and opposite in direction to the magnetic force acting on the left side of the loop.

From this analysis, we conclude that power is supplied only when the loop is either entering or leaving the field. Furthermore, this example shows that the motional emf induced in the loop can be zero even when there is motion through the field! A motional emf is induced *only* when the magnetic flux through the loop *changes in time*.

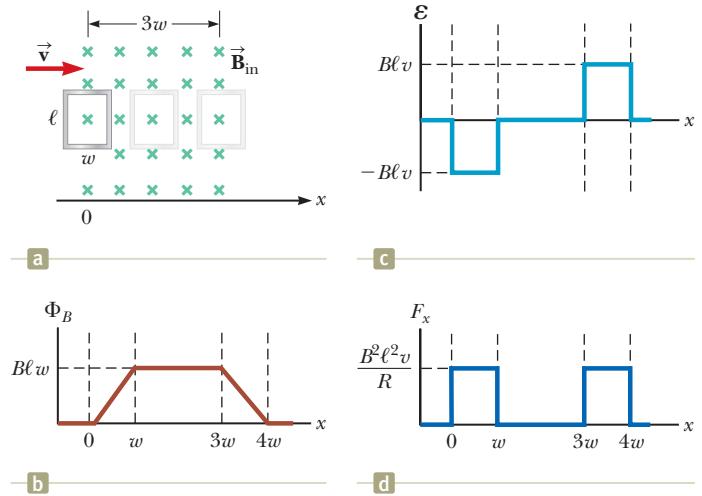


Figure 31.14 (Conceptual Example 31.6) (a) A conducting rectangular loop of width w and length ℓ moving with a velocity \vec{v} through a uniform magnetic field extending a distance $3w$. (b) Magnetic flux through the area enclosed by the loop as a function of loop position. (c) Induced emf as a function of loop position. (d) Applied force required for constant velocity as a function of loop position.

31.4 Induced emf and Electric Fields

We have seen that a changing magnetic flux induces an emf and a current in a conducting loop. In our study of electricity, we related a current to an electric field that applies electric forces on charged particles. In the same way, we can relate an induced current in a conducting loop to an electric field by claiming that an electric field is created in the conductor as a result of the changing magnetic flux.

We also noted in our study of electricity that the existence of an electric field is independent of the presence of any test charges. This independence suggests that even in the absence of a conducting loop, a changing magnetic field generates an electric field in empty space.

This induced electric field is *nonconservative*, unlike the electrostatic field produced by stationary charges. To illustrate this point, consider a conducting loop of radius r situated in a uniform magnetic field that is perpendicular to the plane of the loop as in Figure 31.15. If the magnetic field changes with time, an emf $\mathcal{E} = -d\Phi_B/dt$ is, according to Faraday's law (Eq. 31.1), induced in the loop. The induction of a current in the loop implies the presence of an induced electric field \vec{E} , which must be tangent to the loop because that is the direction in which the charges in the wire move in response to the electric force. The work done by the electric field in moving a charge q once around the loop is equal to $q\mathcal{E}$. Because the electric force acting on the charge is $q\vec{E}$, the work done by the electric field in

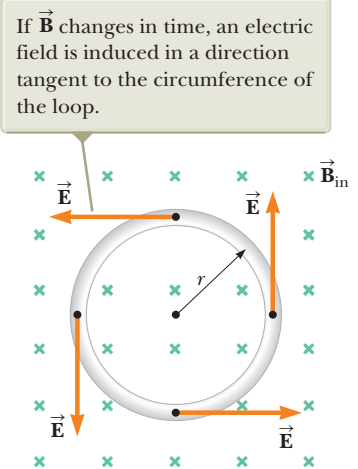


Figure 31.15 A conducting loop of radius r in a uniform magnetic field perpendicular to the plane of the loop.

Pitfall Prevention 31.1

Induced Electric Fields The changing magnetic field does *not* need to exist at the location of the induced electric field. In Figure 31.15, even a loop outside the region of magnetic field experiences an induced electric field.

moving the charge once around the loop is $qE(2\pi r)$, where $2\pi r$ is the circumference of the loop. These two expressions for the work done must be equal; therefore,

$$q\mathcal{E} = qE(2\pi r)$$

$$E = \frac{\mathcal{E}}{2\pi r}$$

Using this result along with Equation 31.1 and that $\Phi_B = BA = B\pi r^2$ for a circular loop, the induced electric field can be expressed as

$$E = -\frac{1}{2\pi r} \frac{d\Phi_B}{dt} = -\frac{r}{2} \frac{dB}{dt} \quad (31.8)$$

If the time variation of the magnetic field is specified, the induced electric field can be calculated from Equation 31.8.

The emf for any closed path can be expressed as the line integral of $\vec{E} \cdot d\vec{s}$ over that path: $\mathcal{E} = \oint \vec{E} \cdot d\vec{s}$. In more general cases, E may not be constant and the path may not be a circle. Hence, Faraday's law of induction, $\mathcal{E} = -d\Phi_B/dt$, can be written in the general form

$$\oint \vec{E} \cdot d\vec{s} = -\frac{d\Phi_B}{dt} \quad (31.9)$$

Faraday's law in general form ►

The induced electric field \vec{E} in Equation 31.9 is a nonconservative field that is generated by a changing magnetic field. The field \vec{E} that satisfies Equation 31.9 cannot possibly be an electrostatic field because were the field electrostatic and hence conservative, the line integral of $\vec{E} \cdot d\vec{s}$ over a closed loop would be zero (Section 25.1), which would be in contradiction to Equation 31.9.

Example 31.7 Electric Field Induced by a Changing Magnetic Field in a Solenoid

A long solenoid of radius R has n turns of wire per unit length and carries a time-varying current that varies sinusoidally as $I = I_{\max} \cos \omega t$, where I_{\max} is the maximum current and ω is the angular frequency of the alternating current source (Fig. 31.16).

(A) Determine the magnitude of the induced electric field outside the solenoid at a distance $r > R$ from its long central axis.

SOLUTION

Conceptualize Figure 31.16 shows the physical situation. As the current in the coil changes, imagine a changing magnetic field at all points in space as well as an induced electric field.

Categorize In this analysis problem, because the current varies in time, the magnetic field is changing, leading to an induced electric field as opposed to the electrostatic electric fields due to stationary electric charges.

Analyze First consider an external point and take the path for the line integral to be a circle of radius r centered on the solenoid as illustrated in Figure 31.16.

Evaluate the right side of Equation 31.9, noting that the magnetic field \vec{B} inside the solenoid is perpendicular to the circle bounded by the path of integration:

$$(1) \quad -\frac{d\Phi_B}{dt} = -\frac{d}{dt}(B\pi R^2) = -\pi R^2 \frac{dB}{dt}$$

Evaluate the magnetic field inside the solenoid from Equation 30.17:

$$(2) \quad B = \mu_0 n I = \mu_0 n I_{\max} \cos \omega t$$

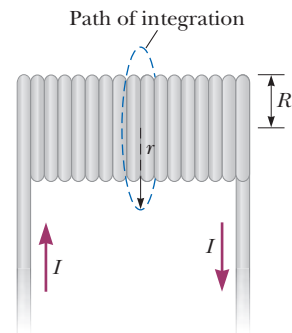


Figure 31.16 (Example 31.7)

A long solenoid carrying a time-varying current given by $I = I_{\max} \cos \omega t$. An electric field is induced both inside and outside the solenoid.

► 31.7 continued

Substitute Equation (2) into Equation (1):

$$(3) \quad -\frac{d\Phi_B}{dt} = -\pi R^2 \mu_0 n I_{\max} \frac{d}{dt}(\cos \omega t) = \pi R^2 \mu_0 n I_{\max} \omega \sin \omega t$$

Evaluate the left side of Equation 31.9, noting that the magnitude of \vec{E} is constant on the path of integration and \vec{E} is tangent to it:

$$(4) \quad \oint \vec{E} \cdot d\vec{s} = E(2\pi r)$$

Substitute Equations (3) and (4) into Equation 31.9:

$$E(2\pi r) = \pi R^2 \mu_0 n I_{\max} \omega \sin \omega t$$

Solve for the magnitude of the electric field:

$$E = \frac{\mu_0 n I_{\max} \omega R^2}{2r} \sin \omega t \quad (\text{for } r > R)$$

Finalize This result shows that the amplitude of the electric field outside the solenoid falls off as $1/r$ and varies sinusoidally with time. It is proportional to the current I as well as to the frequency ω , consistent with the fact that a larger value of ω means more change in magnetic flux per unit time. As we will learn in Chapter 34, the time-varying electric field creates an additional contribution to the magnetic field. The magnetic field can be somewhat stronger than we first stated, both inside and outside the solenoid. The correction to the magnetic field is small if the angular frequency ω is small. At high frequencies, however, a new phenomenon can dominate: The electric and magnetic fields, each re-creating the other, constitute an electromagnetic wave radiated by the solenoid as we will study in Chapter 34.

(B) What is the magnitude of the induced electric field inside the solenoid, a distance r from its axis?

SOLUTION

Analyze For an interior point ($r < R$), the magnetic flux through an integration loop is given by $\Phi_B = B\pi r^2$.

Evaluate the right side of Equation 31.9:

$$(5) \quad -\frac{d\Phi_B}{dt} = -\frac{d}{dt}(B\pi r^2) = -\pi r^2 \frac{dB}{dt}$$

Substitute Equation (2) into Equation (5):

$$(6) \quad -\frac{d\Phi_B}{dt} = -\pi r^2 \mu_0 n I_{\max} \frac{d}{dt}(\cos \omega t) = \pi r^2 \mu_0 n I_{\max} \omega \sin \omega t$$

Substitute Equations (4) and (6) into Equation 31.9:

$$E(2\pi r) = \pi r^2 \mu_0 n I_{\max} \omega \sin \omega t$$

Solve for the magnitude of the electric field:

$$E = \frac{\mu_0 n I_{\max} \omega}{2} r \sin \omega t \quad (\text{for } r < R)$$

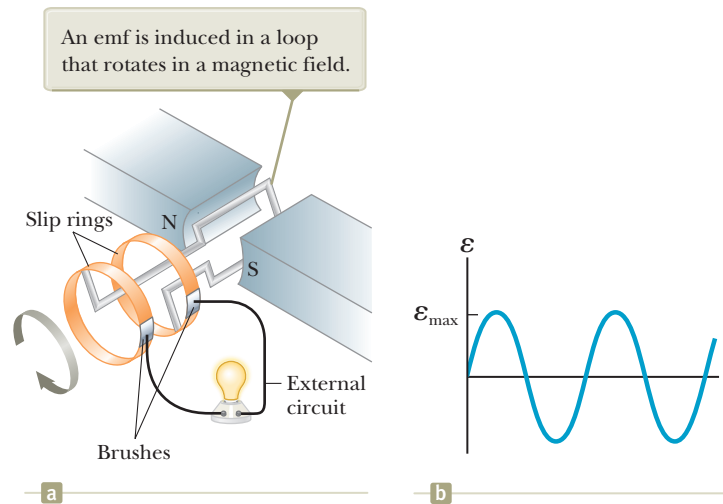
Finalize This result shows that the amplitude of the electric field induced inside the solenoid by the changing magnetic flux through the solenoid increases linearly with r and varies sinusoidally with time. As with the field outside the solenoid, the field inside is proportional to the current I and the frequency ω .

31.5 Generators and Motors

Electric generators are devices that take in energy by work and transfer it out by electrical transmission. To understand how they operate, let us consider the **alternating-current (AC) generator**. In its simplest form, it consists of a loop of wire rotated by some external means in a magnetic field (Fig. 31.17a, page 950).

In commercial power plants, the energy required to rotate the loop can be derived from a variety of sources. For example, in a hydroelectric plant, falling water directed against the blades of a turbine produces the rotary motion; in a coal-fired plant, the energy released by burning coal is used to convert water to steam, and this steam is directed against the turbine blades.

Figure 31.17 (a) Schematic diagram of an AC generator. (b) The alternating emf induced in the loop plotted as a function of time.



As a loop rotates in a magnetic field, the magnetic flux through the area enclosed by the loop changes with time, and this change induces an emf and a current in the loop according to Faraday's law. The ends of the loop are connected to slip rings that rotate with the loop. Connections from these slip rings, which act as output terminals of the generator, to the external circuit are made by stationary metallic brushes in contact with the slip rings.

Instead of a single turn, suppose a coil with N turns (a more practical situation), with the same area A , rotates in a magnetic field with a constant angular speed ω . If θ is the angle between the magnetic field and the normal to the plane of the coil as in Figure 31.18, the magnetic flux through the coil at any time t is

$$\Phi_B = BA \cos \theta = BA \cos \omega t$$

where we have used the relationship $\theta = \omega t$ between angular position and angular speed (see Eq. 10.3). (We have set the clock so that $t = 0$ when $\theta = 0$.) Hence, the induced emf in the coil is

$$\mathcal{E} = -N \frac{d\Phi_B}{dt} = -NBA \frac{d}{dt} (\cos \omega t) = NBA\omega \sin \omega t \quad (31.10)$$

This result shows that the emf varies sinusoidally with time as plotted in Figure 31.17b. Equation 31.10 shows that the maximum emf has the value

$$\mathcal{E}_{\max} = NBA\omega \quad (31.11)$$

which occurs when $\omega t = 90^\circ$ or 270° . In other words, $\mathcal{E} = \mathcal{E}_{\max}$ when the magnetic field is in the plane of the coil and the time rate of change of flux is a maximum. Furthermore, the emf is zero when $\omega t = 0$ or 180° , that is, when $\vec{\mathbf{B}}$ is perpendicular to the plane of the coil and the time rate of change of flux is zero.

The frequency for commercial generators in the United States and Canada is 60 Hz, whereas in some European countries it is 50 Hz. (Recall that $\omega = 2\pi f$, where f is the frequency in hertz.)

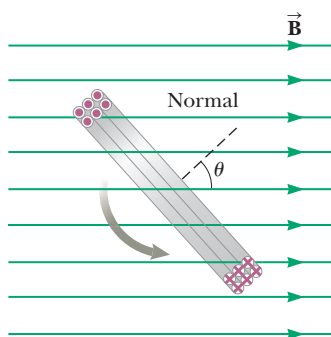


Figure 31.18 A cutaway view of a loop enclosing an area A and containing N turns, rotating with constant angular speed ω in a magnetic field. The emf induced in the loop varies sinusoidally in time.

Quick Quiz 31.4 In an AC generator, a coil with N turns of wire spins in a magnetic field. Of the following choices, which does *not* cause an increase in the emf generated in the coil? (a) replacing the coil wire with one of lower resistance (b) spinning the coil faster (c) increasing the magnetic field (d) increasing the number of turns of wire on the coil

Example 31.8 emf Induced in a Generator

The coil in an AC generator consists of 8 turns of wire, each of area $A = 0.0900 \text{ m}^2$, and the total resistance of the wire is 12.0Ω . The coil rotates in a 0.500-T magnetic field at a constant frequency of 60.0 Hz .

(A) Find the maximum induced emf in the coil.

SOLUTION

Conceptualize Study Figure 31.17 to make sure you understand the operation of an AC generator.

Categorize We evaluate parameters using equations developed in this section, so we categorize this example as a substitution problem.

Use Equation 31.11 to find the maximum induced emf: $\mathcal{E}_{\text{max}} = NBA\omega = NBA(2\pi f)$

Substitute numerical values: $\mathcal{E}_{\text{max}} = 8(0.500 \text{ T})(0.0900 \text{ m}^2)(2\pi)(60.0 \text{ Hz}) = 136 \text{ V}$

(B) What is the maximum induced current in the coil when the output terminals are connected to a low-resistance conductor?

SOLUTION

Use Equation 27.7 and the result to part (A):

$$I_{\text{max}} = \frac{\mathcal{E}_{\text{max}}}{R} = \frac{136 \text{ V}}{12.0 \Omega} = 11.3 \text{ A}$$

The **direct-current (DC) generator** is illustrated in Figure 31.19a. Such generators are used, for instance, in older cars to charge the storage batteries. The components are essentially the same as those of the AC generator except that the contacts to the rotating coil are made using a split ring called a *commutator*.

In this configuration, the output voltage always has the same polarity and pulsates with time as shown in Figure 31.19b. We can understand why by noting that the contacts to the split ring reverse their roles every half cycle. At the same time, the polarity of the induced emf reverses; hence, the polarity of the split ring (which is the same as the polarity of the output voltage) remains the same.

A pulsating DC current is not suitable for most applications. To obtain a steadier DC current, commercial DC generators use many coils and commutators distributed so that the sinusoidal pulses from the various coils are out of phase. When these pulses are superimposed, the DC output is almost free of fluctuations.

A **motor** is a device into which energy is transferred by electrical transmission while energy is transferred out by work. A motor is essentially a generator operating

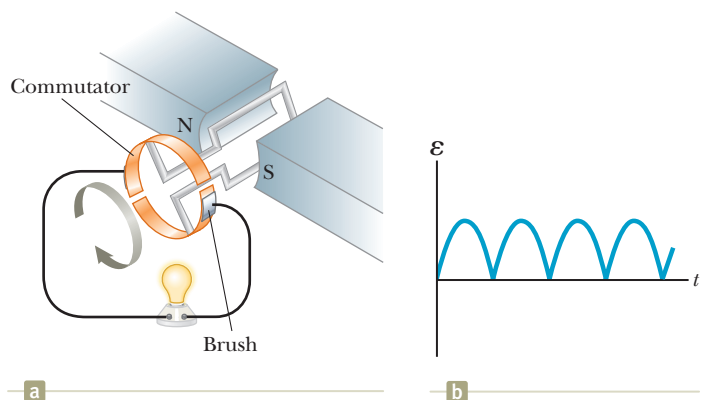


Figure 31.19 (a) Schematic diagram of a DC generator. (b) The magnitude of the emf varies in time, but the polarity never changes.



John W. Jewett, Jr.

Figure 31.20 The engine compartment of a Toyota Prius, a hybrid vehicle.

in reverse. Instead of generating a current by rotating a coil, a current is supplied to the coil by a battery, and the torque acting on the current-carrying coil (Section 29.5) causes it to rotate.

Useful mechanical work can be done by attaching the rotating coil of a motor to some external device. As the coil rotates in a magnetic field, however, the changing magnetic flux induces an emf in the coil; consistent with Lenz's law, this induced emf always acts to reduce the current in the coil. The back emf increases in magnitude as the rotational speed of the coil increases. (The phrase *back emf* is used to indicate an emf that tends to reduce the supplied current.) Because the voltage available to supply current equals the difference between the supply voltage and the back emf, the current in the rotating coil is limited by the back emf.

When a motor is turned on, there is initially no back emf, and the current is very large because it is limited only by the resistance of the coil. As the coil begins to rotate, the induced back emf opposes the applied voltage and the current in the coil decreases. If the mechanical load increases, the motor slows down, which causes the back emf to decrease. This reduction in the back emf increases the current in the coil and therefore also increases the power needed from the external voltage source. For this reason, the power requirements for running a motor are greater for heavy loads than for light ones. If the motor is allowed to run under no mechanical load, the back emf reduces the current to a value just large enough to overcome energy losses due to internal energy and friction. If a very heavy load jams the motor so that it cannot rotate, the lack of a back emf can lead to dangerously high current in the motor's wire. This dangerous situation is explored in the What If? section of Example 31.9.

A modern application of motors in automobiles is seen in the development of *hybrid drive systems*. In these automobiles, a gasoline engine and an electric motor are combined to increase the fuel economy of the vehicle and reduce its emissions. Figure 31.20 shows the engine compartment of a Toyota Prius, one of the hybrids available in the United States. In this automobile, power to the wheels can come from either the gasoline engine or the electric motor. In normal driving, the electric motor accelerates the vehicle from rest until it is moving at a speed of about 15 mi/h (24 km/h). During this acceleration period, the engine is not running, so gasoline is not used and there is no emission. At higher speeds, the motor and engine work together so that the engine always operates at or near its most efficient speed. The result is a significantly higher gasoline mileage than that obtained by a traditional gasoline-powered automobile. When a hybrid vehicle brakes, the motor acts as a generator and returns some of the vehicle's kinetic energy back to the battery as stored energy. In a normal vehicle, this kinetic energy is not recovered because it is transformed to internal energy in the brakes and roadway.

Example 31.9 The Induced Current in a Motor

A motor contains a coil with a total resistance of $10\ \Omega$ and is supplied by a voltage of 120 V. When the motor is running at its maximum speed, the back emf is 70 V.

(A) Find the current in the coil at the instant the motor is turned on.

SOLUTION

Conceptualize Think about the motor just after it is turned on. It has not yet moved, so there is no back emf generated. As a result, the current in the motor is high. After the motor begins to turn, a back emf is generated and the current decreases.

Categorize We need to combine our new understanding about motors with the relationship between current, voltage, and resistance in this substitution problem.

► 31.9 continued

Evaluate the current in the coil from Equation 27.7 with no back emf generated:

$$I = \frac{\mathcal{E}}{R} = \frac{120 \text{ V}}{10 \ \Omega} = 12 \text{ A}$$

(B) Find the current in the coil when the motor has reached maximum speed.

SOLUTION

Evaluate the current in the coil with the maximum back emf generated:

$$I = \frac{\mathcal{E} - \mathcal{E}_{\text{back}}}{R} = \frac{120 \text{ V} - 70 \text{ V}}{10 \ \Omega} = \frac{50 \text{ V}}{10 \ \Omega} = 5.0 \text{ A}$$

The current drawn by the motor when operating at its maximum speed is significantly less than that drawn before it begins to turn.

WHAT IF? Suppose this motor is in a circular saw. When you are operating the saw, the blade becomes jammed in a piece of wood and the motor cannot turn. By what percentage does the power input to the motor increase when it is jammed?

Answer You may have everyday experiences with motors becoming warm when they are prevented from turning. That is due to the increased power input to the motor. The higher rate of energy transfer results in an increase in the internal energy of the coil, an undesirable effect.

Set up the ratio of power input to the motor when jammed, using the current calculated in part (A), to that when it is not jammed, part (B):

$$\frac{P_{\text{jammed}}}{P_{\text{not jammed}}} = \frac{I_A^2 R}{I_B^2 R} = \frac{I_A^2}{I_B^2}$$

Substitute numerical values:

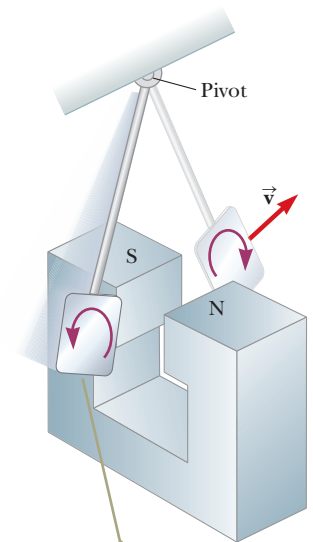
$$\frac{P_{\text{jammed}}}{P_{\text{not jammed}}} = \frac{(12 \text{ A})^2}{(5.0 \text{ A})^2} = 5.76$$

That represents a 476% increase in the input power! Such a high power input can cause the coil to become so hot that it is damaged.

31.6 Eddy Currents

As we have seen, an emf and a current are induced in a circuit by a changing magnetic flux. In the same manner, circulating currents called **eddy currents** are induced in bulk pieces of metal moving through a magnetic field. This phenomenon can be demonstrated by allowing a flat copper or aluminum plate attached at the end of a rigid bar to swing back and forth through a magnetic field (Fig. 31.21). As the plate enters the field, the changing magnetic flux induces an emf in the plate, which in turn causes the free electrons in the plate to move, producing the swirling eddy currents. According to Lenz's law, the direction of the eddy currents is such that they create magnetic fields that oppose the change that causes the currents. For this reason, the eddy currents must produce effective magnetic poles on the plate, which are repelled by the poles of the magnet; this situation gives rise to a repulsive force that opposes the motion of the plate. (If the opposite were true, the plate would accelerate and its energy would increase after each swing, in violation of the law of conservation of energy.)

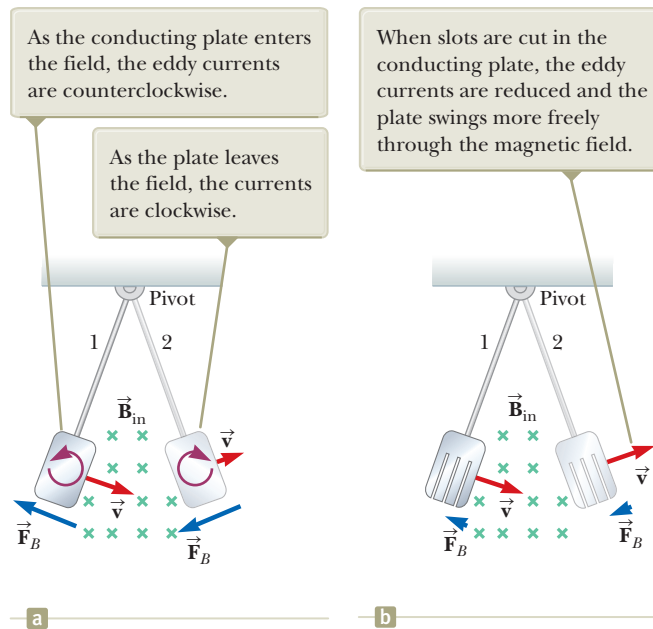
As indicated in Figure 31.22a (page 954), with \vec{B} directed into the page, the induced eddy current is counterclockwise as the swinging plate enters the field at position 1 because the flux due to the external magnetic field into the page through the plate is increasing. Hence, by Lenz's law, the induced current must provide its own magnetic field out of the page. The opposite is true as the plate



As the plate enters or leaves the field, the changing magnetic flux induces an emf, which causes eddy currents in the plate.

Figure 31.21 Formation of eddy currents in a conducting plate moving through a magnetic field.

Figure 31.22 When a conducting plate swings through a magnetic field, eddy currents are induced and the magnetic force \vec{F}_B on the plate opposes its velocity, causing it to eventually come to rest.



leaves the field at position 2, where the current is clockwise. Because the induced eddy current always produces a magnetic retarding force \vec{F}_B when the plate enters or leaves the field, the swinging plate eventually comes to rest.

If slots are cut in the plate as shown in Figure 31.22b, the eddy currents and the corresponding retarding force are greatly reduced. We can understand this reduction in force by realizing that the cuts in the plate prevent the formation of any large current loops.

The braking systems on many subway and rapid-transit cars make use of electromagnetic induction and eddy currents. An electromagnet attached to the train is positioned near the steel rails. (An electromagnet is essentially a solenoid with an iron core.) The braking action occurs when a large current is passed through the electromagnet. The relative motion of the magnet and rails induces eddy currents in the rails, and the direction of these currents produces a drag force on the moving train. Because the eddy currents decrease steadily in magnitude as the train slows down, the braking effect is quite smooth. As a safety measure, some power tools use eddy currents to stop rapidly spinning blades once the device is turned off.

Eddy currents are often undesirable because they represent a transformation of mechanical energy to internal energy. To reduce this energy loss, conducting parts are often laminated; that is, they are built up in thin layers separated by a nonconducting material such as lacquer or a metal oxide. This layered structure prevents large current loops and effectively confines the currents to small loops in individual layers. Such a laminated structure is used in transformer cores (see Section 33.8) and motors to minimize eddy currents and thereby increase the efficiency of these devices.

Quick Quiz 31.5 In an equal-arm balance from the early 20th century (Fig. 31.23), an aluminum sheet hangs from one of the arms and passes between the poles of a magnet, causing the oscillations of the balance to decay rapidly. In the absence of such magnetic braking, the oscillation might continue for a long time, and the experimenter would have to wait to take a reading. Why do the oscillations decay? (a) because the aluminum sheet is attracted to the magnet

- ⋮ (b) because currents in the aluminum sheet set up a magnetic field that opposes
- the oscillations (c) because aluminum is paramagnetic




Figure 31.23 (Quick Quiz 31.5) In an old-fashioned equal-arm balance, an aluminum sheet hangs between the poles of a magnet.

Summary

Concepts and Principles

■ **Faraday's law of induction** states that the emf induced in a loop is directly proportional to the time rate of change of magnetic flux through the loop, or

$$\mathcal{E} = -\frac{d\Phi_B}{dt} \quad (31.1)$$

where $\Phi_B = \int \vec{\mathbf{B}} \cdot d\vec{\mathbf{A}}$ is the magnetic flux through the loop.

■ **Lenz's law** states that the induced current and induced emf in a conductor are in such a direction as to set up a magnetic field that opposes the change that produced them.

■ A general form of **Faraday's law of induction** is

$$\oint \vec{\mathbf{E}} \cdot d\vec{\mathbf{s}} = -\frac{d\Phi_B}{dt} \quad (31.9)$$

where $\vec{\mathbf{E}}$ is the nonconservative electric field that is produced by the changing magnetic flux.

■ When a conducting bar of length ℓ moves at a velocity $\vec{\mathbf{v}}$ through a magnetic field $\vec{\mathbf{B}}$, where $\vec{\mathbf{B}}$ is perpendicular to the bar and to $\vec{\mathbf{v}}$, the **motional emf** induced in the bar is

$$\mathcal{E} = -B\ell v \quad (31.5)$$

Objective Questions

1. denotes answer available in *Student Solutions Manual/Study Guide*

1. Figure OQ31.1 is a graph of the magnetic flux through a certain coil of wire as a function of time during an interval while the radius of the coil is increased, the coil is rotated through 1.5 revolutions, and the external source of the magnetic field is turned off, in that order. Rank the emf induced in the coil at the instants marked A through E from the largest positive value to the largest-magnitude negative value. In your ranking,

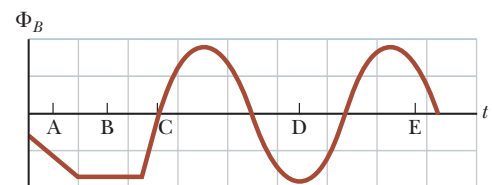


Figure OQ31.1

note any cases of equality and also any instants when the emf is zero.

2. A flat coil of wire is placed in a uniform magnetic field that is in the y direction. (i) The magnetic flux through the coil is a maximum if the plane of the coil is where? More than one answer may be correct. (a) in the xy plane (b) in the yz plane (c) in the xz plane (d) in any orientation, because it is a constant (ii) For what orientation is the flux zero? Choose from the same possibilities as in part (i).
3. A rectangular conducting loop is placed near a long wire carrying a current I as shown in Figure OQ31.3. If I decreases in time, what can be said of the current induced in the loop? (a) The direction of the current depends on the size of the loop. (b) The current is clockwise. (c) The current is counterclockwise. (d) The current is zero. (e) Nothing can be said about the current in the loop without more information.



Figure OQ31.3

4. A circular loop of wire with a radius of 4.0 cm is in a uniform magnetic field of magnitude 0.060 T. The plane of the loop is perpendicular to the direction of the magnetic field. In a time interval of 0.50 s, the magnetic field changes to the opposite direction with a magnitude of 0.040 T. What is the magnitude of the average emf induced in the loop? (a) 0.20 V (b) 0.025 V (c) 5.0 mV (d) 1.0 mV (e) 0.20 mV
5. A square, flat loop of wire is pulled at constant velocity through a region of uniform magnetic field directed perpendicular to the plane of the loop as shown in Figure OQ31.5. Which of the following statements are correct? More than one statement may be correct. (a) Current is induced in the loop in the clockwise direction. (b) Current is induced in the loop in the counterclockwise direction. (c) No current is induced in the loop. (d) Charge separation occurs in the loop, with the top edge positive. (e) Charge separation occurs in the loop, with the top edge negative.

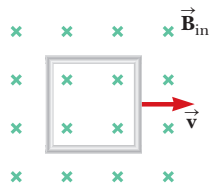


Figure OQ31.5

6. The bar in Figure OQ31.6 moves on rails to the right with a velocity \vec{v} , and a uniform, constant magnetic

field is directed out of the page. Which of the following statements are correct? More than one statement may be correct. (a) The induced current in the loop is zero. (b) The induced current in the loop is clockwise. (c) The induced current in the loop is counterclockwise. (d) An external force is required to keep the bar moving at constant speed. (e) No force is required to keep the bar moving at constant speed.

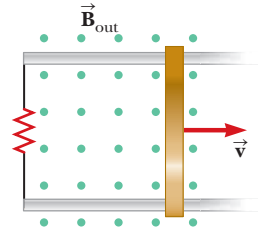


Figure OQ31.6

7. A bar magnet is held in a vertical orientation above a loop of wire that lies in the horizontal plane as shown in Figure OQ31.7. The south end of the magnet is toward the loop. After the magnet is dropped, what is true of the induced current in the loop as viewed from above? (a) It is clockwise as the magnet falls toward the loop. (b) It is counterclockwise as the magnet falls toward the loop. (c) It is clockwise after the magnet has moved through the loop and moves away from it. (d) It is always clockwise. (e) It is first counterclockwise as the magnet approaches the loop and then clockwise after it has passed through the loop.

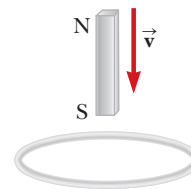


Figure OQ31.7

8. What happens to the amplitude of the induced emf when the rate of rotation of a generator coil is doubled? (a) It becomes four times larger. (b) It becomes two times larger. (c) It is unchanged. (d) It becomes one-half as large. (e) It becomes one-fourth as large.
9. Two coils are placed near each other as shown in Figure OQ31.9. The coil on the left is connected to a battery and a switch, and the coil on the right is connected to a resistor. What is the direction of the cur-

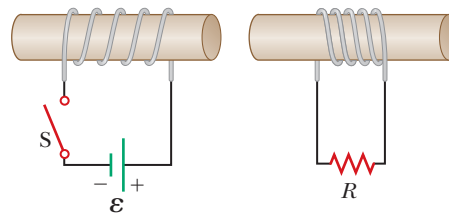


Figure OQ31.9

rent in the resistor (i) at an instant immediately after the switch is thrown closed, (ii) after the switch has been closed for several seconds, and (iii) at an instant after the switch has then been thrown open? Choose each answer from the possibilities (a) left, (b) right, or (c) the current is zero.

10. A circuit consists of a conducting movable bar and a lightbulb connected to two conducting rails as shown in Figure OQ31.10. An external magnetic field is directed perpendicular to the plane of the circuit. Which of the following actions will make the bulb light up? More than one statement may be correct. (a) The bar is




Figure OQ31.10

- (b) The bar is moved to the right. (c) The magnitude of the magnetic field is increased. (d) The magnitude of the magnetic field is decreased. (e) The bar is lifted off the rails.

11. Two rectangular loops of wire lie in the same plane as shown in Figure OQ31.11. If the current I in the outer loop is counterclockwise and increases with time, what is true of the current induced in the inner loop? More than one statement may be correct. (a) It is zero. (b) It is clockwise. (c) It is counterclockwise. (d) Its magnitude depends on the dimensions of the loops. (e) Its direction depends on the dimensions of the loops.



Figure OQ31.11

Conceptual Questions

I. denotes answer available in *Student Solutions Manual/Study Guide*

- In Section 7.7, we defined conservative and nonconservative forces. In Chapter 23, we stated that an electric charge creates an electric field that produces a conservative force. Argue now that induction creates an electric field that produces a nonconservative force.
- A spacecraft orbiting the Earth has a coil of wire in it. An astronaut measures a small current in the coil, although there is no battery connected to it and there are no magnets in the spacecraft. What is causing the current?
- In a hydroelectric dam, how is energy produced that is then transferred out by electrical transmission? That is, how is the energy of motion of the water converted to energy that is transmitted by AC electricity?
- A bar magnet is dropped toward a conducting ring lying on the floor. As the magnet falls toward the ring, does it move as a freely falling object? Explain.
- A circular loop of wire is located in a uniform and constant magnetic field. Describe how an emf can be induced in the loop in this situation.
- A piece of aluminum is dropped vertically downward between the poles of an electromagnet. Does the magnetic field affect the velocity of the aluminum?
- What is the difference between magnetic flux and magnetic field?
- When the switch in Figure CQ31.8a is closed, a current is set up in the coil and the metal ring springs upward (Fig. CQ31.8b). Explain this behavior.

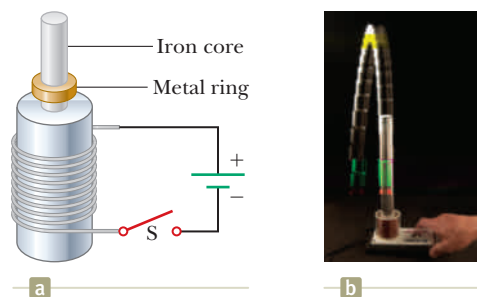


Figure CQ31.8 Conceptual Questions 8 and 9.

- Assume the battery in Figure CQ31.8a is replaced by an AC source and the switch is held closed. If held down, the metal ring on top of the solenoid becomes hot. Why?
- A loop of wire is moving near a long, straight wire carrying a constant current I as shown in Figure CQ31.10. (a) Determine the direction of the induced current in the loop as it moves away from the wire. (b) What would be the direction of the induced current in the loop if it were moving toward the wire?

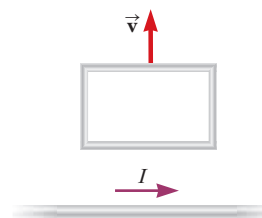


Figure CQ31.10

Problems

WebAssign The problems found in this chapter may be assigned online in Enhanced WebAssign

1. straightforward; 2. intermediate; 3. challenging

1. full solution available in the *Student Solutions Manual/Study Guide*

AMT Analysis Model tutorial available in Enhanced WebAssign

GP Guided Problem

M Master It tutorial available in Enhanced WebAssign

W Watch It video solution available in Enhanced WebAssign

Section 31.1 Faraday's Law of Induction

- A flat loop of wire consisting of a single turn of cross-sectional area 8.00 cm^2 is perpendicular to a magnetic field that increases uniformly in magnitude from 0.500 T to 2.50 T in 1.00 s . What is the resulting induced current if the loop has a resistance of 2.00Ω ?
- An instrument based on induced emf has been used to measure projectile speeds up to 6 km/s . A small magnet is imbedded in the projectile as shown in Figure P31.2. The projectile passes through two coils separated by a distance d . As the projectile passes through each coil, a pulse of emf is induced in the coil. The time interval between pulses can be measured accurately with an oscilloscope, and thus the speed can be determined. (a) Sketch a graph of ΔV versus t for the arrangement shown. Consider a current that flows counterclockwise as viewed from the starting point of the projectile as positive. On your graph, indicate which pulse is from coil 1 and which is from coil 2. (b) If the pulse separation is 2.40 ms and $d = 1.50 \text{ m}$, what is the projectile speed?

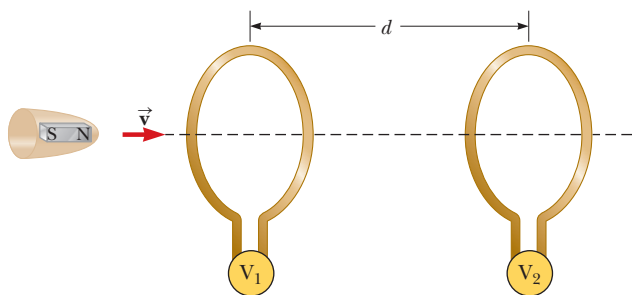


Figure P31.2

- Transcranial magnetic stimulation (TMS) is a noninvasive technique used to stimulate regions of the human brain (Figure P31.3). In TMS, a small coil is placed on the scalp and a brief burst of current in the coil produces a rapidly changing magnetic field inside the brain. The induced emf can stimulate neuronal activity. (a) One such device generates an upward magnetic field within the brain that rises from zero to 1.50 T in 120 ms . Determine the induced emf around a horizontal circle of tissue of radius 1.60 mm . (b) **What If?** The field next changes to 0.500 T downward in 80.0 ms . How does the emf induced in this process compare with that in part (a)?

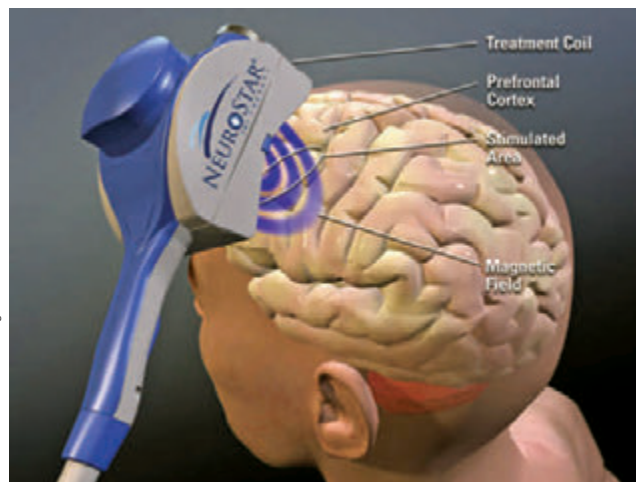


Figure P31.3 Problems 3 and 51. The magnetic coil of a Neurostar TMS apparatus is held near the head of a patient.

- A 25-turn circular coil of wire has diameter 1.00 m . It is placed with its axis along the direction of the Earth's magnetic field of $50.0 \mu\text{T}$ and then in 0.200 s is flipped 180° . An average emf of what magnitude is generated in the coil?

- The flexible loop in Figure P31.5 has a radius of 12.0 cm and is in a magnetic field of magnitude 0.150 T . The loop is grasped at points A and B and stretched until its area is nearly zero. If it takes 0.200 s to close the loop, what is the magnitude of the average induced emf in it during this time interval?

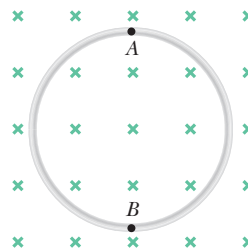


Figure P31.5 Problems 5 and 6.

- A circular loop of wire of radius 12.0 cm is placed in a magnetic field directed perpendicular to the plane of the loop as in Figure P31.5. If the field decreases at the rate of 0.050 T/s in some time interval, find

the magnitude of the emf induced in the loop during this interval.

7. To monitor the breathing of a hospital patient, a thin belt is girded around the patient's chest. The belt is a 200-turn coil. When the patient inhales, the area encircled by the coil increases by 39.0 cm^2 . The magnitude of the Earth's magnetic field is $50.0 \mu\text{T}$ and makes an angle of 28.0° with the plane of the coil. Assuming a patient takes 1.80 s to inhale, find the average induced emf in the coil during this time interval.

8. A strong electromagnet produces a uniform magnetic field of 1.60 T over a cross-sectional area of 0.200 m^2 . A coil having 200 turns and a total resistance of 20.0Ω is placed around the electromagnet. The current in the electromagnet is then smoothly reduced until it reaches zero in 20.0 ms. What is the current induced in the coil?

9. A 30-turn circular coil of radius 4.00 cm and resistance 1.00Ω is placed in a magnetic field directed perpendicular to the plane of the coil. The magnitude of the magnetic field varies in time according to the expression $B = 0.010 0t + 0.040 0t^2$, where B is in teslas and t is in seconds. Calculate the induced emf in the coil at $t = 5.00 \text{ s}$.

10. Scientific work is currently under way to determine whether weak oscillating magnetic fields can affect human health. For example, one study found that drivers of trains had a higher incidence of blood cancer than other railway workers, possibly due to long exposure to mechanical devices in the train engine cab. Consider a magnetic field of magnitude $1.00 \times 10^{-3} \text{ T}$, oscillating sinusoidally at 60.0 Hz. If the diameter of a red blood cell is $8.00 \mu\text{m}$, determine the maximum emf that can be generated around the perimeter of a cell in this field.

11. An aluminum ring of radius $r_1 = 5.00 \text{ cm}$ and resistance $3.00 \times 10^{-4} \Omega$ is placed around one end of a long air-core solenoid with 1 000 turns per meter and radius $r_2 = 3.00 \text{ cm}$ as shown in Figure P31.11. Assume the axial component of the field produced by the solenoid is one-half as strong over the area of the end of the solenoid as at the center of the solenoid. Also assume the solenoid produces negligible field outside its cross-sectional area. The current in the solenoid is increasing at a rate of 270 A/s. (a) What is the induced current in the ring? At the center of the ring, what are (b) the magnitude and (c) the direction of the magnetic field produced by the induced current in the ring?

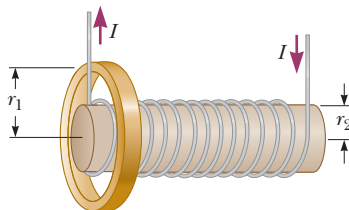


Figure P31.11 Problems 11 and 12.

12. An aluminum ring of radius r_1 and resistance R is placed around one end of a long air-core solenoid with n turns per meter and smaller radius r_2 as shown in Figure P31.11. Assume the axial component of the field produced by the solenoid over the area of the end of the solenoid is one-half as strong as at the center of the solenoid. Also assume the solenoid produces negligible field outside its cross-sectional area. The current in the solenoid is increasing at a rate of $\Delta I/\Delta t$. (a) What is the induced current in the ring? (b) At the center of the ring, what is the magnetic field produced by the induced current in the ring? (c) What is the direction of this field?

13. A loop of wire in the shape of a rectangle of width w and length L and a long, straight wire carrying a current I lie on a tabletop as shown in Figure P31.13. (a) Determine the magnetic flux through the loop due to the current I . (b) Suppose the current is changing with time according to $I = a + bt$, where a and b are constants. Determine the emf that is induced in the loop if $b = 10.0 \text{ A/s}$, $h = 1.00 \text{ cm}$, $w = 10.0 \text{ cm}$, and $L = 1.00 \text{ m}$. (c) What is the direction of the induced current in the rectangle?

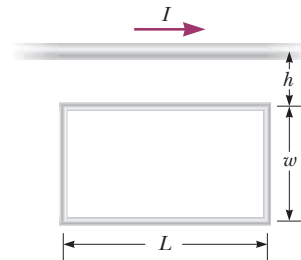


Figure P31.13

14. A coil of 15 turns and radius 10.0 cm surrounds a long solenoid of radius 2.00 cm and 1.00×10^3 turns/meter (Fig. P31.14). The current in the solenoid changes as $I = 5.00 \sin 120t$, where I is in amperes and t is in seconds. Find the induced emf in the 15-turn coil as a function of time.

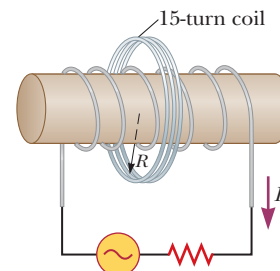


Figure P31.14

15. A square, single-turn wire loop $\ell = 1.00 \text{ cm}$ on a side is placed inside a solenoid that has a circular cross section of radius $r = 3.00 \text{ cm}$ as shown in the end view of Figure P31.15 (page 960). The solenoid is 20.0 cm long and wound with 100 turns of wire. (a) If the current in the solenoid is 3.00 A, what is the magnetic flux

through the square loop? (b) If the current in the solenoid is reduced to zero in 3.00 s, what is the magnitude of the average induced emf in the square loop?

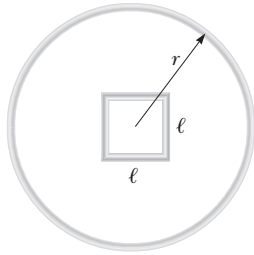


Figure P31.15

- 16.** A long solenoid has $n = 400$ turns per meter and carries a current given by $I = 30.0(1 - e^{-1.60t})$, where I is in amperes and t is in seconds. Inside the solenoid and coaxial with it is a coil that has a radius of $R = 6.00$ cm and consists of a total of $N = 250$ turns of fine wire (Fig. P31.16). What emf is induced in the coil by the changing current?

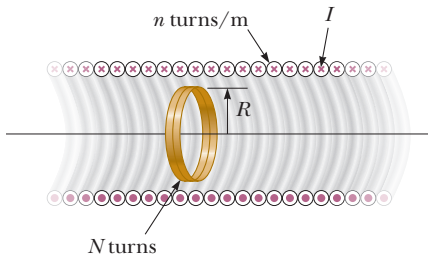


Figure P31.16

- 17.** A coil formed by wrapping 50 turns of wire in the shape of a square is positioned in a magnetic field so that the normal to the plane of the coil makes an angle of 30.0° with the direction of the field. When the magnetic field is increased uniformly from $200 \mu\text{T}$ to $600 \mu\text{T}$ in 0.400 s, an emf of magnitude 80.0 mV is induced in the coil. What is the total length of the wire in the coil?

- 18.** When a wire carries an AC current with a known frequency, you can use a *Rogowski coil* to determine the amplitude I_{max} of the current without disconnecting the wire to shunt the current through a meter. The Rogowski coil, shown in Figure P31.18, simply clips around the wire. It consists of a toroidal conductor wrapped around a circular return cord. Let n represent the number of turns in the toroid per unit distance along it. Let A represent the cross-sectional area of the

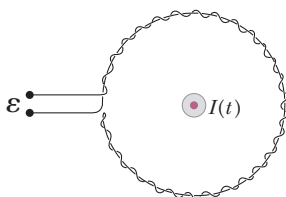


Figure P31.18

toroid. Let $I(t) = I_{\text{max}} \sin \omega t$ represent the current to be measured. (a) Show that the amplitude of the emf induced in the Rogowski coil is $\mathcal{E}_{\text{max}} = \mu_0 n A \omega I_{\text{max}}$. (b) Explain why the wire carrying the unknown current need not be at the center of the Rogowski coil and why the coil will not respond to nearby currents that it does not enclose.

- 19.** A toroid having a rectangular cross section ($a = 2.00$ cm by $b = 3.00$ cm) and inner radius $R = 4.00$ cm consists of $N = 500$ turns of wire that carry a sinusoidal current $I = I_{\text{max}} \sin \omega t$, with $I_{\text{max}} = 50.0$ A and a frequency $f = \omega/2\pi = 60.0$ Hz. A coil that consists of $N' = 20$ turns of wire is wrapped around one section of the toroid as shown in Figure P31.19. Determine the emf induced in the coil as a function of time.

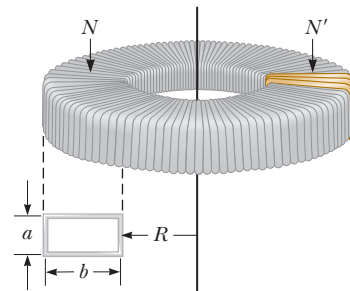


Figure P31.19

- 20.** A piece of insulated wire is shaped into a figure eight as shown in Figure P31.20. For simplicity, model the two halves of the figure eight as circles. The radius of the upper circle is 5.00 cm and that of the lower circle is 9.00 cm. The wire has a uniform resistance per unit length of $3.00 \Omega/\text{m}$. A uniform magnetic field is applied perpendicular to the plane of the two circles, in the direction shown. The magnetic field is increasing at a constant rate of 2.00 T/s . Find (a) the magnitude and (b) the direction of the induced current in the wire.




Figure P31.20

Section 31.2 Motional emf

Section 31.3 Lenz's Law

Problem 72 in Chapter 29 can be assigned with this section.

- 21.** A helicopter (Fig. P31.21) has blades of length 3.00 m, extending out from a central hub and rotating at 2.00 rev/s. If the vertical component of the Earth's

magnetic field is $50.0 \mu\text{T}$, what is the emf induced between the blade tip and the center hub?



Figure P31.21

22. Use Lenz's law to answer the following questions concerning the direction of induced currents. Express your answers in terms of the letter labels a and b in each part of Figure P31.22. (a) What is the direction of the induced current in the resistor R in Figure P31.22a when the bar magnet is moved to the left? (b) What is the direction of the current induced in the resistor R immediately after the switch S in Figure P31.22b is closed? (c) What is the direction of the induced current in the resistor R when the current I in Figure P31.22c decreases rapidly to zero?

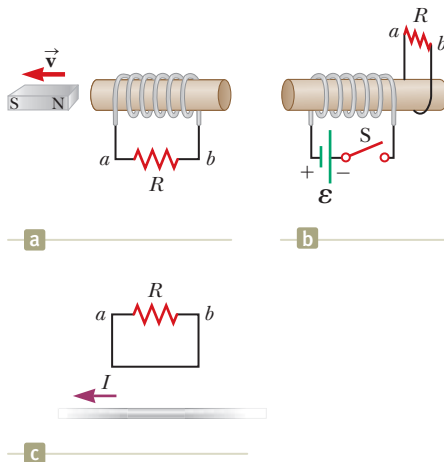


Figure P31.22

23. A truck is carrying a steel beam of length 15.0 m on a freeway. An accident causes the beam to be dumped off the truck and slide horizontally along the ground at a speed of 25.0 m/s . The velocity of the center of mass of the beam is northward while the length of the beam maintains an east–west orientation. The vertical component of the Earth's magnetic field at this location has a magnitude of $35.0 \mu\text{T}$. What is the magnitude of the induced emf between the ends of the beam?
24. A small airplane with a wingspan of 14.0 m is flying due north at a speed of 70.0 m/s over a region where the vertical component of the Earth's magnetic field is $1.20 \mu\text{T}$ downward. (a) What potential difference is

developed between the airplane's wingtips? (b) Which wingtip is at higher potential? (c) **What If?** How would the answers to parts (a) and (b) change if the plane turned to fly due east? (d) Can this emf be used to power a lightbulb in the passenger compartment? Explain your answer.

25. A 2.00-m length of wire is held in an east–west direction and moves horizontally to the north with a speed of 0.500 m/s . The Earth's magnetic field in this region is of magnitude $50.0 \mu\text{T}$ and is directed northward and 53.0° below the horizontal. (a) Calculate the magnitude of the induced emf between the ends of the wire and (b) determine which end is positive.
26. Consider the arrangement shown in Figure P31.26. Assume that $R = 6.00 \Omega$, $\ell = 1.20 \text{ m}$, and a uniform 2.50-T magnetic field is directed into the page. At what speed should the bar be moved to produce a current of 0.500 A in the resistor?

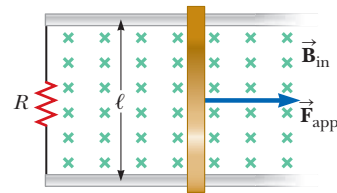


Figure P31.26 Problems 26 through 29.

27. Figure P31.26 shows a top view of a bar that can slide on two frictionless rails. The resistor is $R = 6.00 \Omega$, and a 2.50-T magnetic field is directed perpendicularly downward, into the paper. Let $\ell = 1.20 \text{ m}$. (a) Calculate the applied force required to move the bar to the right at a constant speed of 2.00 m/s . (b) At what rate is energy delivered to the resistor?
28. A metal rod of mass m slides without friction along two parallel horizontal rails, separated by a distance ℓ and connected by a resistor R , as shown in Figure P31.26. A uniform vertical magnetic field of magnitude B is applied perpendicular to the plane of the paper. The applied force shown in the figure acts only for a moment, to give the rod a speed v . In terms of m , ℓ , R , B , and v , find the distance the rod will then slide as it coasts to a stop.
29. A conducting rod of length ℓ moves on two horizontal, frictionless rails as shown in Figure P31.26. If a constant force of 1.00 N moves the bar at 2.00 m/s through a magnetic field \vec{B} that is directed into the page, (a) what is the current through the $8.00\text{-}\Omega$ resistor R ? (b) What is the rate at which energy is delivered to the resistor? (c) What is the mechanical power delivered by the force \vec{F}_{app} ?
30. *Why is the following situation impossible?* An automobile has a vertical radio antenna of length $\ell = 1.20 \text{ m}$. The automobile travels on a curvy, horizontal road where the Earth's magnetic field has a magnitude of $B = 50.0 \mu\text{T}$ and is directed toward the north and downward at an angle of $\theta = 65.0^\circ$ below the horizontal. The

motional emf developed between the top and bottom of the antenna varies with the speed and direction of the automobile's travel and has a maximum value of 4.50 mV.

- 31. Review.** Figure P31.31 shows a bar of mass $m = 0.200$ kg that can slide without friction on a pair of rails separated by a distance $\ell = 1.20$ m and located on an inclined plane that makes an angle $\theta = 25.0^\circ$ with respect to the ground. The resistance of the resistor is $R = 1.00 \Omega$ and a uniform magnetic field of magnitude $B = 0.500$ T is directed downward, perpendicular to the ground, over the entire region through which the bar moves. With what constant speed v does the bar slide along the rails?

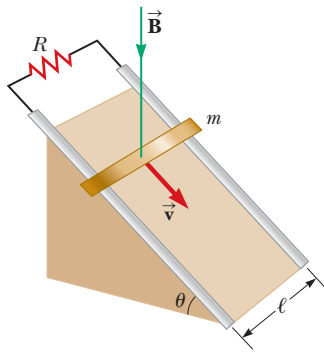


Figure P31.31 Problems 31 and 32.

- 32. Review.** Figure P31.31 shows a bar of mass m that can slide without friction on a pair of rails separated by a distance ℓ and located on an inclined plane that makes an angle θ with respect to the ground. The resistance of the resistor is R , and a uniform magnetic field of magnitude B is directed downward, perpendicular to the ground, over the entire region through which the bar moves. With what constant speed v does the bar slide along the rails?

- 33. M** The *homopolar generator*, also called the *Faraday disk*, is a low-voltage, high-current electric generator. It consists of a rotating conducting disk with one stationary brush (a sliding electrical contact) at its axle and another at a point on its circumference as shown in Figure P31.33. A uniform magnetic field is applied perpendicular to the plane of the disk. Assume the field is 0.900 T, the angular speed is 3.20×10^3 rev/min, and the radius of

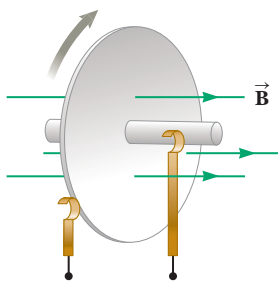


Figure P31.33

the disk is 0.400 m. Find the emf generated between the brushes. When superconducting coils are used to produce a large magnetic field, a homopolar generator can have a power output of several megawatts. Such a generator is useful, for example, in purifying metals by electrolysis. If a voltage is applied to the output terminals of the generator, it runs in reverse as a *homopolar motor* capable of providing great torque, useful in ship propulsion.

- 34.** A conducting bar of length ℓ moves to the right on two frictionless rails as shown in Figure P31.34. A uniform magnetic field directed into the page has a magnitude of 0.300 T. Assume $R = 9.00 \Omega$ and $\ell = 0.350$ m. (a) At what constant speed should the bar move to produce an 8.50-mA current in the resistor? (b) What is the direction of the induced current? (c) At what rate is energy delivered to the resistor? (d) Explain the origin of the energy being delivered to the resistor.

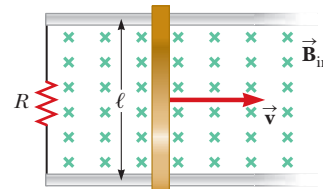


Figure P31.34

- 35. Review.** After removing one string while restringing his acoustic guitar, a student is distracted by a video game. His experimentalist roommate notices his inattention and attaches one end of the string, of linear density $\mu = 3.00 \times 10^{-3}$ kg/m, to a rigid support. The other end passes over a pulley, a distance $\ell = 64.0$ cm from the fixed end, and an object of mass $m = 27.2$ kg is attached to the hanging end of the string. The roommate places a magnet across the string as shown in Figure P31.35. The magnet does not touch the string, but produces a uniform field of 4.50 mT over a 2.00-cm length of the string and negligible field elsewhere. Strumming the string sets it vibrating vertically at its fundamental (lowest) frequency. The section of the string in the magnetic field moves perpendicular to the field with a uniform amplitude of 1.50 cm. Find (a) the frequency and (b) the amplitude of the emf induced between the ends of the string.

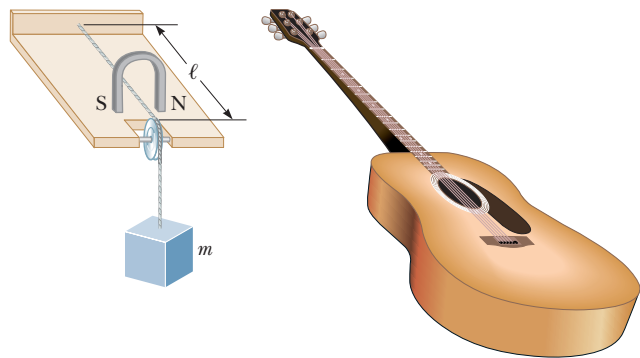


Figure P31.35

36. A rectangular coil with resistance R has N turns, each of length ℓ and width w as shown in Figure P31.36. The coil moves into a uniform magnetic field \vec{B} with constant velocity \vec{v} . What are the magnitude and direction of the total magnetic force on the coil (a) as it enters the magnetic field, (b) as it moves within the field, and (c) as it leaves the field?

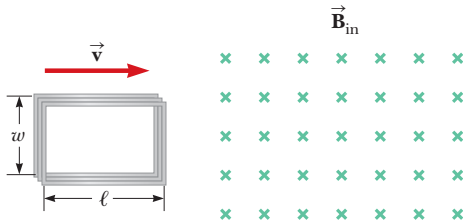


Figure P31.36

37. Two parallel rails with negligible resistance are 10.0 cm apart and are connected by a resistor of resistance $R_3 = 5.00 \Omega$. The circuit also contains two metal rods having resistances of $R_1 = 10.0 \Omega$ and $R_2 = 15.0 \Omega$ sliding along the rails (Fig. P31.37). The rods are pulled away from the resistor at constant speeds of $v_1 = 4.00$ m/s and $v_2 = 2.00$ m/s, respectively. A uniform magnetic field of magnitude $B = 0.010$ T is applied perpendicular to the plane of the rails. Determine the current in R_3 .

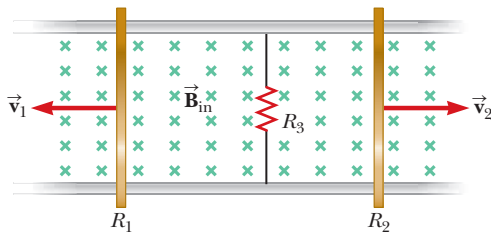


Figure P31.37

38. An astronaut is connected to her spacecraft by a 25.0-m-long tether cord as she and the spacecraft orbit the Earth in a circular path at a speed of 7.80×10^3 m/s. At one instant, the emf between the ends of a wire embedded in the cord is measured to be 1.17 V. Assume the long dimension of the cord is perpendicular to the Earth's magnetic field at that instant. Assume also the tether's center of mass moves with a velocity perpendicular to the Earth's magnetic field. (a) What is the magnitude of the Earth's field at this location? (b) Does the emf change as the system moves from one location to another? Explain. (c) Provide two conditions under which the emf would be zero even though the magnetic field is not zero.

Section 31.4 Induced emf and Electric Fields

39. Within the green dashed circle shown in Figure P31.39, the magnetic field changes with time according to the expression $B = 2.00t^3 - 4.00t^2 + 0.800$, where B is in teslas, t is in seconds, and $R = 2.50$ cm. When $t = 2.00$ s, calculate (a) the magnitude and (b) the direc-

tion of the force exerted on an electron located at point P_1 , which is at a distance $r_1 = 5.00$ cm from the center of the circular field region. (c) At what instant is this force equal to zero?

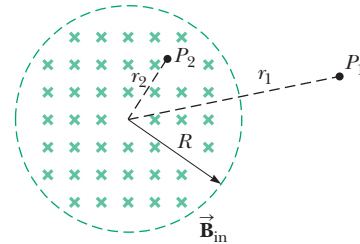


Figure P31.39 Problems 39 and 40.

40. A magnetic field directed into the page changes with time according to $B = 0.030$ $0t^2 + 1.40$, where B is in teslas and t is in seconds. The field has a circular cross section of radius $R = 2.50$ cm (see Fig. P31.39). When $t = 3.00$ s and $r_2 = 0.020$ m, what are (a) the magnitude and (b) the direction of the electric field at point P_2 ?
41. A long solenoid with 1.00×10^3 turns per meter and radius 2.00 cm carries an oscillating current $I = 5.00 \sin 100\pi t$, where I is in amperes and t is in seconds. (a) What is the electric field induced at a radius $r = 1.00$ cm from the axis of the solenoid? (b) What is the direction of this electric field when the current is increasing counterclockwise in the solenoid?

Section 31.5 Generators and Motors

Problems 50 and 68 in Chapter 29 can be assigned with this section.

42. A 100-turn square coil of side 20.0 cm rotates about a vertical axis at 1.50×10^3 rev/min as indicated in Figure P31.42. The horizontal component of the Earth's magnetic field at the coil's location is equal to 2.00×10^{-5} T. (a) Calculate the maximum emf induced in the coil by this field. (b) What is the orientation of the coil with respect to the magnetic field when the maximum emf occurs?

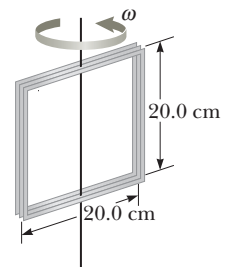


Figure P31.42

43. A generator produces 24.0 V when turning at 900 rev/min. What emf does it produce when turning at 500 rev/min?
44. Figure P31.44 (page 964) is a graph of the induced emf versus time for a coil of N turns rotating with angular speed ω in a uniform magnetic field directed perpendicular to the coil's axis of rotation. **What If?** Copy this sketch (on a larger scale) and on the same set of axes show the graph of emf versus t (a) if the number of turns in the coil is doubled, (b) if instead the angular

speed is doubled, and (c) if the angular speed is doubled while the number of turns in the coil is halved.

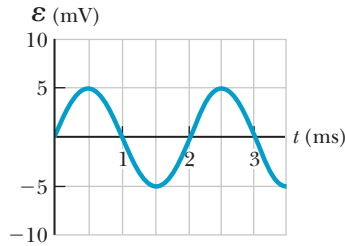


Figure P31.44

45. In a 250-turn automobile alternator, the magnetic flux Φ_B in each turn is $\Phi_B = 2.50 \times 10^{-4} \cos \omega t$, where Φ_B is in webers, ω is the angular speed of the alternator, and t is in seconds. The alternator is geared to rotate three times for each engine revolution. When the engine is running at an angular speed of 1.00×10^3 rev/min, determine (a) the induced emf in the alternator as a function of time and (b) the maximum emf in the alternator.
46. In Figure P31.46, a semicircular conductor of radius $R = 0.250$ m is rotated about the axis AC at a constant rate of 120 rev/min. A uniform magnetic field of magnitude 1.30 T fills the entire region below the axis and is directed out of the page. (a) Calculate the maximum value of the emf induced between the ends of the conductor. (b) What is the value of the average induced emf for each complete rotation? (c) **What If?** How would your answers to parts (a) and (b) change if the magnetic field were allowed to extend a distance R above the axis of rotation? Sketch the emf versus time (d) when the field is as drawn in Figure P31.46 and (e) when the field is extended as described in part (c).

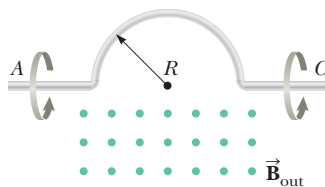


Figure P31.46

47. A long solenoid, with its axis along the x axis, consists of 200 turns per meter of wire that carries a steady current of 15.0 A. A coil is formed by wrapping 30 turns of thin wire around a circular frame that has a radius of 8.00 cm. The coil is placed inside the solenoid and mounted on an axis that is a diameter of the coil and coincides with the y axis. The coil is then rotated with an angular speed of 4.00π rad/s. The plane of the coil is in the yz plane at $t = 0$. Determine the emf generated in the coil as a function of time.
48. A motor in normal operation carries a direct current of 0.850 A when connected to a 120-V power supply. The resistance of the motor windings is 11.8Ω . While in normal operation, (a) what is the back emf gener-

ated by the motor? (b) At what rate is internal energy produced in the windings? (c) **What If?** Suppose a malfunction stops the motor shaft from rotating. At what rate will internal energy be produced in the windings in this case? (Most motors have a thermal switch that will turn off the motor to prevent overheating when this stalling occurs.)

49. The rotating loop in an AC generator is a square 10.0 cm on each side. It is rotated at 60.0 Hz in a uniform field of 0.800 T. Calculate (a) the flux through the loop as a function of time, (b) the emf induced in the loop, (c) the current induced in the loop for a loop resistance of 1.00Ω , (d) the power delivered to the loop, and (e) the torque that must be exerted to rotate the loop.

Section 31.6 Eddy Currents

50. Figure P31.50 represents an electromagnetic brake that uses eddy currents. An electromagnet hangs from a railroad car near one rail. To stop the car, a large current is sent through the coils of the electromagnet. The moving electromagnet induces eddy currents in the rails, whose fields oppose the change in the electromagnet's field. The magnetic fields of the eddy currents exert force on the current in the electromagnet, thereby slowing the car. The direction of the car's motion and the direction of the current in the electromagnet are shown correctly in the picture. Determine which of the eddy currents shown on the rails is correct. Explain your answer.

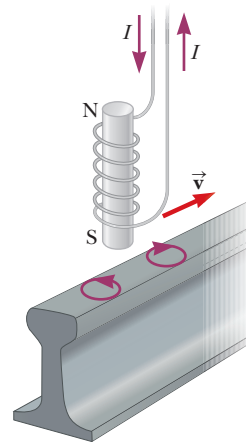


Figure P31.50

Additional Problems

51. Consider a transcranial magnetic stimulation (TMS) device (Figure P31.3) containing a coil with several turns of wire, each of radius 6.00 cm. In a circular area of the brain of radius 6.00 cm directly below and coaxial with the coil, the magnetic field changes at the rate of 1.00×10^4 T/s. Assume that this rate of change is the same everywhere inside the circular area. (a) What is the emf induced around the circumference of this circular area in the brain? (b) What electric field is induced on the circumference of this circular area?

52. Suppose you wrap wire onto the core from a roll of cellophane tape to make a coil. Describe how you can use a bar magnet to produce an induced voltage in the coil. What is the order of magnitude of the emf you generate? State the quantities you take as data and their values.

53. **M** A circular coil enclosing an area of 100 cm^2 is made of 200 turns of copper wire (Figure P31.53). The wire making up the coil has no resistance; the ends of the wire are connected across a $5.00\text{-}\Omega$ resistor to form a closed circuit. Initially, a 1.10-T uniform magnetic field points perpendicularly upward through the plane of the coil. The direction of the field then reverses so that the final magnetic field has a magnitude of 1.10 T and points downward through the coil. If the time interval required for the field to reverse directions is 0.100 s , what is the average current in the coil during that time?

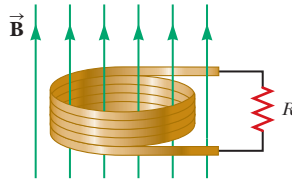


Figure P31.53

54. A circular loop of wire of resistance $R = 0.500 \text{ }\Omega$ and radius $r = 8.00 \text{ cm}$ is in a uniform magnetic field directed out of the page as in Figure P31.54. If a clockwise current of $I = 2.50 \text{ mA}$ is induced in the loop, (a) is the magnetic field increasing or decreasing in time? (b) Find the rate at which the field is changing with time.

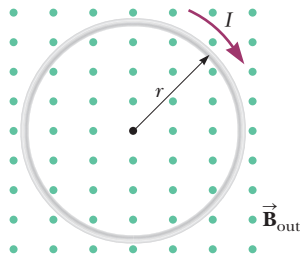


Figure P31.54

55. A rectangular loop of area $A = 0.160 \text{ m}^2$ is placed in a region where the magnetic field is perpendicular to the plane of the loop. The magnitude of the field is allowed to vary in time according to $B = 0.350 e^{-t/2.00}$, where B is in teslas and t is in seconds. The field has the constant value 0.350 T for $t < 0$. What is the value for \mathcal{E} at $t = 4.00 \text{ s}$?
56. A rectangular loop of area A is placed in a region where the magnetic field is perpendicular to the plane of the loop. The magnitude of the field is allowed to vary in time according to $B = B_{\text{max}} e^{-t/\tau}$, where B_{max} and τ are constants. The field has the constant value B_{max} for $t < 0$. Find the emf induced in the loop as a function of time.
57. Strong magnetic fields are used in such medical procedures as magnetic resonance imaging, or MRI. A technician wearing a brass bracelet enclosing area 0.00500 m^2

places her hand in a solenoid whose magnetic field is 5.00 T directed perpendicular to the plane of the bracelet. The electrical resistance around the bracelet's circumference is $0.0200 \text{ }\Omega$. An unexpected power failure causes the field to drop to 1.50 T in a time interval of 20.0 ms . Find (a) the current induced in the bracelet and (b) the power delivered to the bracelet. *Note:* As this problem implies, you should not wear any metal objects when working in regions of strong magnetic fields.

58. **GP** Consider the apparatus shown in Figure P31.58 in which a conducting bar can be moved along two rails connected to a lightbulb. The whole system is immersed in a magnetic field of magnitude $B = 0.400 \text{ T}$ perpendicular and into the page. The distance between the horizontal rails is $\ell = 0.800 \text{ m}$. The resistance of the lightbulb is $R = 48.0 \text{ }\Omega$, assumed to be constant. The bar and rails have negligible resistance. The bar is moved toward the right by a constant force of magnitude $F = 0.600 \text{ N}$. We wish to find the maximum power delivered to the lightbulb. (a) Find an expression for the current in the lightbulb as a function of B , ℓ , R , and v , the speed of the bar. (b) When the maximum power is delivered to the lightbulb, what analysis model properly describes the moving bar? (c) Use the analysis model in part (b) to find a numerical value for the speed v of the bar when the maximum power is being delivered to the lightbulb. (d) Find the current in the lightbulb when maximum power is being delivered to it. (e) Using $P = I^2 R$, what is the maximum power delivered to the lightbulb? (f) What is the maximum mechanical input power delivered to the bar by the force F ? (g) We have assumed the resistance of the lightbulb is constant. In reality, as the power delivered to the lightbulb increases, the filament temperature increases and the resistance increases. Does the speed found in part (c) change if the resistance increases and all other quantities are held constant? (h) If so, does the speed found in part (c) increase or decrease? If not, explain. (i) With the assumption that the resistance of the lightbulb increases as the current increases, does the power found in part (f) change? (j) If so, is the power found in part (f) larger or smaller? If not, explain.

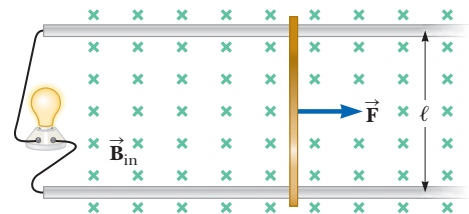


Figure P31.58

59. A guitar's steel string vibrates (see Fig. 31.5). The component of magnetic field perpendicular to the area of a pickup coil nearby is given by

$$B = 50.0 + 3.20 \sin 1046\pi t$$

where B is in milliteslas and t is in seconds. The circular pickup coil has 30 turns and radius 2.70 mm . Find the emf induced in the coil as a function of time.

60. Why is the following situation impossible? A conducting rectangular loop of mass $M = 0.100$ kg, resistance $R = 1.00 \Omega$, and dimensions $w = 50.0$ cm by $\ell = 90.0$ cm is held with its lower edge just above a region with a uniform magnetic field of magnitude $B = 1.00$ T as shown in Figure P31.60. The loop is released from rest. Just as the top edge of the loop reaches the region containing the field, the loop moves with a speed 4.00 m/s.

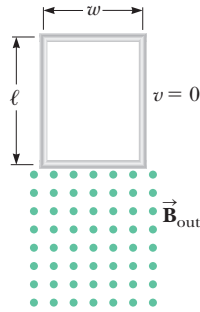


Figure P31.60

61. The circuit in Figure P31.61 is located in a magnetic field whose magnitude varies with time according to the expression $B = 1.00 \times 10^{-3} t$, where B is in teslas and t is in seconds. Assume the resistance per length of the wire is $0.100 \Omega/\text{m}$. Find the current in section PQ of length $a = 65.0$ cm.

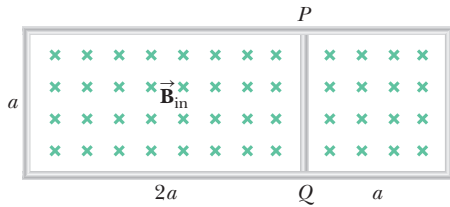


Figure P31.61

62. Magnetic field values are often determined by using a device known as a *search coil*. This technique depends on the measurement of the total charge passing through a coil in a time interval during which the magnetic flux linking the windings changes either because of the coil's motion or because of a change in the value of B . (a) Show that as the flux through the coil changes from Φ_1 to Φ_2 , the charge transferred through the coil is given by $Q = N(\Phi_2 - \Phi_1)/R$, where R is the resistance of the coil and N is the number of turns. (b) As a specific example, calculate B when a total charge of 5.00×10^{-4} C passes through a 100-turn coil of resistance 200Ω and cross-sectional area 40.0 cm^2 as it is rotated in a uniform field from a position where the plane of the coil is perpendicular to the field to a position where it is parallel to the field.

63. A conducting rod of length $\ell = 35.0$ cm is free to slide on two parallel conducting bars as shown in Figure P31.63. Two resistors $R_1 = 2.00 \Omega$ and $R_2 = 5.00 \Omega$ are connected across the ends of the bars to form a loop. A constant magnetic field $B = 2.50$ T is directed perpendicularly into the page. An external agent pulls the rod to the left with a constant speed of $v = 8.00$ m/s.

Find (a) the currents in both resistors, (b) the total power delivered to the resistance of the circuit, and (c) the magnitude of the applied force that is needed to move the rod with this constant velocity.

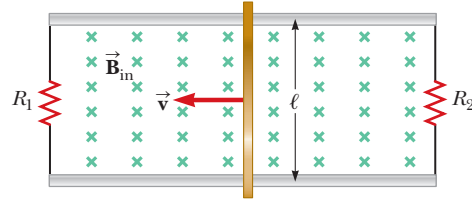


Figure P31.63

64. Review. A particle with a mass of 2.00×10^{-16} kg and a charge of 30.0 nC starts from rest, is accelerated through a potential difference ΔV , and is fired from a small source in a region containing a uniform, constant magnetic field of magnitude 0.600 T. The particle's velocity is perpendicular to the magnetic field lines. The circular orbit of the particle as it returns to the location of the source encloses a magnetic flux of $15.0 \mu\text{Wb}$. (a) Calculate the particle's speed. (b) Calculate the potential difference through which the particle was accelerated inside the source.

65. The plane of a square loop of wire with edge length $a = 0.200$ m is oriented vertically and along an east-west axis. The Earth's magnetic field at this point is of magnitude $B = 35.0 \mu\text{T}$ and is directed northward at 35.0° below the horizontal. The total resistance of the loop and the wires connecting it to a sensitive ammeter is 0.500Ω . If the loop is suddenly collapsed by horizontal forces as shown in Figure P31.65, what total charge enters one terminal of the ammeter?

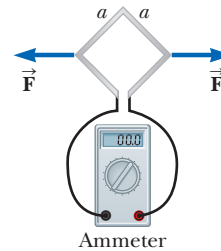


Figure P31.65

66. In Figure P31.66, the rolling axle, 1.50 m long, is pushed along horizontal rails at a constant speed $v = 3.00$ m/s. A resistor $R = 0.400 \Omega$ is connected to the rails at points a and b , directly opposite each other.

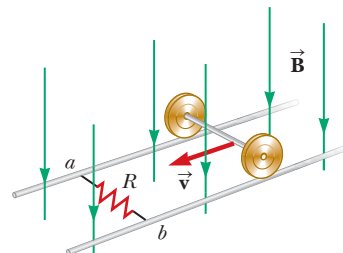


Figure P31.66

The wheels make good electrical contact with the rails, so the axle, rails, and R form a closed-loop circuit. The only significant resistance in the circuit is R . A uniform magnetic field $B = 0.080 \text{ T}$ is vertically downward. (a) Find the induced current I in the resistor. (b) What horizontal force F is required to keep the axle rolling at constant speed? (c) Which end of the resistor, a or b , is at the higher electric potential? (d) **What If?** After the axle rolls past the resistor, does the current in R reverse direction? Explain your answer.

67. Figure P31.67 shows a stationary conductor whose shape is similar to the letter e. The radius of its circular portion is $a = 50.0 \text{ cm}$. It is placed in a constant magnetic field of 0.500 T directed out of the page. A straight conducting rod, 50.0 cm long, is pivoted about point O and rotates with a constant angular speed of 2.00 rad/s . (a) Determine the induced emf in the loop POQ . Note that the area of the loop is $\theta a^2/2$. (b) If all the conducting material has a resistance per length of $5.00 \text{ } \Omega/\text{m}$, what is the induced current in the loop POQ at the instant 0.250 s after point P passes point Q ?

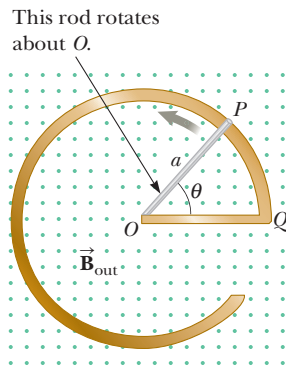


Figure P31.67

68. A conducting rod moves with a constant velocity in a direction perpendicular to a long, straight wire carrying a current I as shown in Figure P31.68. Show that the magnitude of the emf generated between the ends of the rod is

$$|\mathcal{E}| = \frac{\mu_0 v I \ell}{2\pi r}$$

In this case, note that the emf decreases with increasing r as you might expect.

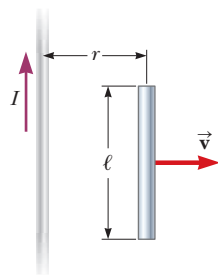


Figure P31.68

69. A small, circular washer of radius $a = 0.500 \text{ cm}$ is held directly below a long, straight wire carrying a current of $I = 10.0 \text{ A}$. The washer is located $h = 0.500 \text{ m}$ above the top of a table (Fig. P31.69). Assume the magnetic field is nearly constant over the area of the washer and equal to the magnetic field at the center of the washer. (a) If the washer is dropped from rest, what is the magnitude of the average induced emf in the washer over the time interval between its release and the moment it hits the tabletop? (b) What is the direction of the induced current in the washer?

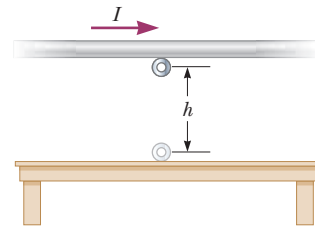


Figure P31.69

70. Figure P31.70 shows a compact, circular coil with 220 turns and radius 12.0 cm immersed in a uniform magnetic field parallel to the axis of the coil. The rate of change of the field has the constant magnitude 20.0 mT/s . (a) What additional information is necessary to determine whether the coil is carrying clockwise or counterclockwise current? (b) The coil overheats if more than 160 W of power is delivered to it. What resistance would the coil have at this critical point? (c) To run cooler, should it have lower resistance or higher resistance?

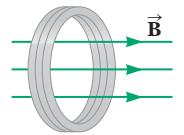


Figure P31.70

71. A rectangular coil of 60 turns, dimensions 0.100 m by 0.200 m , and total resistance $10.0 \text{ } \Omega$ rotates with angular speed 30.0 rad/s about the y axis in a region where a 1.00-T magnetic field is directed along the x axis. The time $t = 0$ is chosen to be at an instant when the plane of the coil is perpendicular to the direction of \vec{B} . Calculate (a) the maximum induced emf in the coil, (b) the maximum rate of change of magnetic flux through the coil, (c) the induced emf at $t = 0.050 \text{ s}$, and (d) the torque exerted by the magnetic field on the coil at the instant when the emf is a maximum.

72. **Review.** In Figure P31.72, a uniform magnetic field decreases at a constant rate $dB/dt = -K$, where K is a positive constant. A circular loop of wire of radius a containing a resistance R and a capacitance C is placed

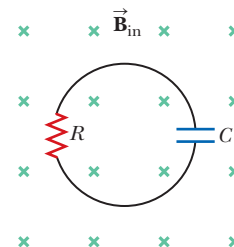


Figure P31.72

with its plane normal to the field. (a) Find the charge Q on the capacitor when it is fully charged. (b) Which plate, upper or lower, is at the higher potential? (c) Discuss the force that causes the separation of charges.

73. An N -turn square coil with side ℓ and resistance R is pulled to the right at constant speed v in the presence of a uniform magnetic field B acting perpendicular to the coil as shown in Figure P31.73. At $t = 0$, the right side of the coil has just departed the right edge of the field. At time t , the left side of the coil enters the region where $B = 0$. In terms of the quantities N , B , ℓ , v , and R , find symbolic expressions for (a) the magnitude of the induced emf in the loop during the time interval from $t = 0$ to t , (b) the magnitude of the induced current in the coil, (c) the power delivered to the coil, and (d) the force required to remove the coil from the field. (e) What is the direction of the induced current in the loop? (f) What is the direction of the magnetic force on the loop while it is being pulled out of the field?

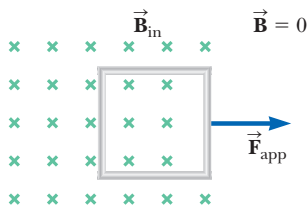


Figure P31.73

74. A conducting rod of length ℓ moves with velocity \vec{v} parallel to a long wire carrying a steady current I . The axis of the rod is maintained perpendicular to the wire with the near end a distance r away (Fig. P31.74). Show that the magnitude of the emf induced in the rod is

$$|\mathcal{E}| = \frac{\mu_0 I v}{2\pi} \ln \left(1 + \frac{\ell}{r} \right)$$

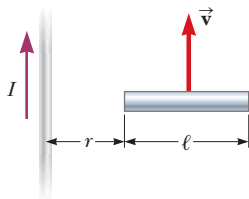


Figure P31.74

75. The magnetic flux through a metal ring varies with time t according to $\Phi_B = at^3 - bt^2$, where Φ_B is in webers, $a = 6.00 \text{ s}^{-3}$, $b = 18.0 \text{ s}^{-2}$, and t is in seconds. The resistance of the ring is $3.00 \text{ } \Omega$. For the interval from $t = 0$ to $t = 2.00 \text{ s}$, determine the maximum current induced in the ring.

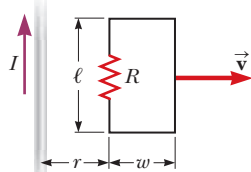


Figure P31.76

rent I in the plane of the loop (Fig. P31.76). The total resistance of the loop is R . Derive an expression that gives the current in the loop at the instant the near side is a distance r from the wire.

77. A long, straight wire carries a current given by $I = I_{\text{max}} \sin(\omega t + \phi)$. The wire lies in the plane of a rectangular coil of N turns of wire as shown in Figure P31.77. The quantities I_{max} , ω , and ϕ are all constants. Assume $I_{\text{max}} = 50.0 \text{ A}$, $\omega = 200\pi \text{ s}^{-1}$, $N = 100$, $h = w = 5.00 \text{ cm}$, and $L = 20.0 \text{ cm}$. Determine the emf induced in the coil by the magnetic field created by the current in the straight wire.

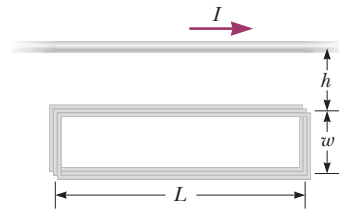


Figure P31.77

78. A thin wire $\ell = 30.0 \text{ cm}$ long is held parallel to and $d = 80.0 \text{ cm}$ above a long, thin wire carrying $I = 200 \text{ A}$ and fixed in position (Fig. P31.78). The 30.0-cm wire is released at the instant $t = 0$ and falls, remaining parallel to the current-carrying wire as it falls. Assume the falling wire accelerates at 9.80 m/s^2 . (a) Derive an equation for the emf induced in it as a function of time. (b) What is the minimum value of the emf? (c) What is the maximum value? (d) What is the induced emf 0.300 s after the wire is released?

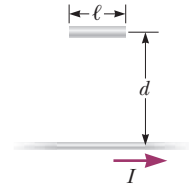


Figure P31.78

Challenge Problems

79. Two infinitely long solenoids (seen in cross section) pass through a circuit as shown in Figure P31.79. The magnitude of \vec{B} inside each is the same and is increasing at the rate of 100 T/s . What is the current in each resistor?

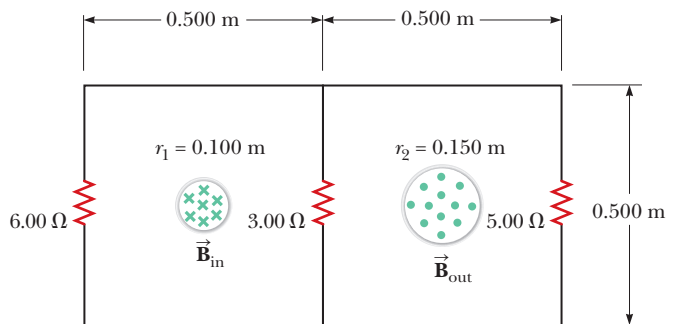


Figure P31.79

80. An induction furnace uses electromagnetic induction to produce eddy currents in a conductor, thereby raising the conductor's temperature. Commercial units

operate at frequencies ranging from 60 Hz to about 1 MHz and deliver powers from a few watts to several megawatts. Induction heating can be used for warming a metal pan on a kitchen stove. It can be used to avoid oxidation and contamination of the metal when welding in a vacuum enclosure. To explore induction heating, consider a flat conducting disk of radius R , thickness b , and resistivity ρ . A sinusoidal magnetic field $B_{\max} \cos \omega t$ is applied perpendicular to the disk. Assume the eddy currents occur in circles concentric with the disk. (a) Calculate the average power delivered to the disk. (b) **What If?** By what factor does the power change when the amplitude of the field doubles? (c) When the frequency doubles? (d) When the radius of the disk doubles?

81. A bar of mass m and resistance R slides without friction in a horizontal plane, moving on parallel rails as shown in Figure P31.81. The rails are separated by a distance d . A battery that maintains a constant emf \mathcal{E} is connected between the rails, and a constant magnetic field \vec{B} is directed perpendicularly out of the page. Assuming the bar starts from rest at time $t = 0$, show that at time t it moves with a speed

$$v = \frac{\mathcal{E}}{Bd} (1 - e^{-B^2 d^2 t / mR})$$

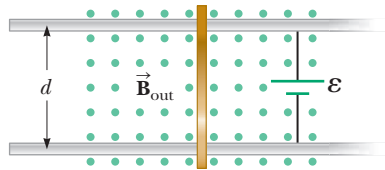


Figure P31.81

82. A *betatron* is a device that accelerates electrons to energies in the MeV range by means of electromagnetic induction. Electrons in a vacuum chamber are held in a circular orbit by a magnetic field perpendicular to the orbital plane. The magnetic field is gradually increased to induce an electric field around the orbit. (a) Show that the electric field is in the correct direction to make the electrons speed up. (b) Assume the radius of the orbit remains constant. Show that the average magnetic field over the area enclosed by the orbit must be twice as large as the magnetic field at the circle's circumference.

83. **Review.** The bar of mass m in Figure P31.83 is pulled horizontally across parallel, frictionless rails by a massless string that passes over a light, frictionless pulley and is attached to a suspended object of mass M . The uniform upward magnetic field has a magnitude B , and the distance between the rails is ℓ . The only significant electrical resistance is the load resistor R shown connecting the rails at one end. Assuming the suspended object is released with the bar at rest at $t = 0$, derive an expression that gives the bar's horizontal speed as a function of time.

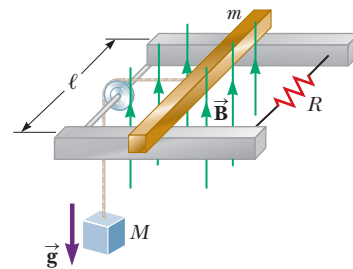


Figure P31.83

- 32.1 Self-Induction and Inductance
- 32.2 *RL* Circuits
- 32.3 Energy in a Magnetic Field
- 32.4 Mutual Inductance
- 32.5 Oscillations in an *LC* Circuit
- 32.6 The *RLC* Circuit



A treasure hunter uses a metal detector to search for buried objects at a beach. At the end of the metal detector is a coil of wire that is part of a circuit. When the coil comes near a metal object, the inductance of the coil is affected and the current in the circuit changes. This change triggers a signal in the earphones worn by the treasure hunter. We investigate inductance in this chapter. (Andy Ryan/Stone/Getty Images)

In Chapter 31, we saw that an emf and a current are induced in a loop of wire when the magnetic flux through the area enclosed by the loop changes with time. This phenomenon of electromagnetic induction has some practical consequences. In this chapter, we first describe an effect known as *self-induction*, in which a time-varying current in a circuit produces an induced emf opposing the emf that initially set up the time-varying current. Self-induction is the basis of the *inductor*, an electrical circuit element. We discuss the energy stored in the magnetic field of an inductor and the energy density associated with the magnetic field.

Next, we study how an emf is induced in a coil as a result of a changing magnetic flux produced by a second coil, which is the basic principle of *mutual induction*. Finally, we examine the characteristics of circuits that contain inductors, resistors, and capacitors in various combinations.

32.1 Self-Induction and Inductance

In this chapter, we need to distinguish carefully between emfs and currents that are caused by physical sources such as batteries and those that are induced by changing magnetic fields. When we use a term (such as *emf* or *current*) without an adjective, we are describing the parameters associated with a physical source. We use the adjective *induced* to describe those emfs and currents caused by a changing magnetic field.

Consider a circuit consisting of a switch, a resistor, and a source of emf as shown in Figure 32.1. The circuit diagram is represented in perspective to show the orientations of some of the magnetic field lines due to the current in the circuit. When the switch is thrown to its closed position, the current does not immediately jump from zero to its maximum value \mathcal{E}/R . Faraday's law of electromagnetic induction (Eq. 31.1) can be used to describe this effect as follows. As the current increases with time, the magnetic field lines surrounding the wires pass through the loop represented by the circuit itself. This magnetic field passing through the loop causes a magnetic flux through the loop. This increasing flux creates an induced emf in the circuit. The direction of the induced emf is such that it would cause an induced current in the loop (if the loop did not already carry a current), which would establish a magnetic field opposing the change in the original magnetic field. Therefore, the direction of the induced emf is opposite the direction of the emf of the battery, which results in a gradual rather than instantaneous increase in the current to its final equilibrium value. Because of the direction of the induced emf, it is also called a *back emf*, similar to that in a motor as discussed in Chapter 31. This effect is called **self-induction** because the changing flux through the circuit and the resultant induced emf arise from the circuit itself. The emf \mathcal{E}_L set up in this case is called a **self-induced emf**.

To obtain a quantitative description of self-induction, recall from Faraday's law that the induced emf is equal to the negative of the time rate of change of the magnetic flux. The magnetic flux is proportional to the magnetic field, which in turn is proportional to the current in the circuit. Therefore, a self-induced emf is always proportional to the time rate of change of the current. For any loop of wire, we can write this proportionality as

$$\mathcal{E}_L = -L \frac{di}{dt} \quad (32.1)$$

where L is a proportionality constant—called the **inductance** of the loop—that depends on the geometry of the loop and other physical characteristics. If we consider a closely spaced coil of N turns (a toroid or an ideal solenoid) carrying a current i and containing N turns, Faraday's law tells us that $\mathcal{E}_L = -N d\Phi_B/dt$. Combining this expression with Equation 32.1 gives

$$L = \frac{N\Phi_B}{i} \quad (32.2)$$

where it is assumed the same magnetic flux passes through each turn and L is the inductance of the entire coil.


From Equation 32.1, we can also write the inductance as the ratio

$$L = -\frac{\mathcal{E}_L}{di/dt} \quad (32.3)$$

Recall that resistance is a measure of the opposition to current as given by Equation 27.7, $R = \Delta V/I$; in comparison, Equation 32.3, being of the same mathematical form as Equation 27.7, shows us that inductance is a measure of the opposition to a *change* in current.

The SI unit of inductance is the **henry** (H), which as we can see from Equation 32.3 is 1 volt-second per ampere: $1 \text{ H} = 1 \text{ V} \cdot \text{s}/\text{A}$.

As shown in Example 32.1, the inductance of a coil depends on its geometry. This dependence is analogous to the capacitance of a capacitor depending on the geometry of its plates as we found in Equation 26.3 and the resistance of a resistor depending on the length and area of the conducting material in Equation 27.10. Inductance calculations can be quite difficult to perform for complicated geometries, but the examples below involve simple situations for which inductances are easily evaluated.



Joseph Henry

American Physicist (1797–1878)

Henry became the first director of the Smithsonian Institution and first president of the Academy of Natural Science. He improved the design of the electromagnet and constructed one of the first motors. He also discovered the phenomenon of self-induction, but he failed to publish his findings. The unit of inductance, the henry, is named in his honor.

◀ Inductance of an N -turn coil

After the switch is closed, the current produces a magnetic flux through the area enclosed by the loop. As the current increases toward its equilibrium value, this magnetic flux changes in time and induces an emf in the loop.

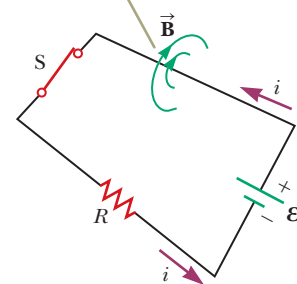


Figure 32.1 Self-induction in a simple circuit.

- Quick Quiz 32.1** A coil with zero resistance has its ends labeled a and b . The potential at a is higher than at b . Which of the following could be consistent with this situation? (a) The current is constant and is directed from a to b . (b) The current is constant and is directed from b to a . (c) The current is increasing and is directed from a to b . (d) The current is decreasing and is directed from a to b . (e) The current is increasing and is directed from b to a . (f) The current is decreasing and is directed from b to a .

Example 32.1 Inductance of a Solenoid

Consider a uniformly wound solenoid having N turns and length ℓ . Assume ℓ is much longer than the radius of the windings and the core of the solenoid is air.

(A) Find the inductance of the solenoid.

SOLUTION

Conceptualize The magnetic field lines from each turn of the solenoid pass through all the turns, so an induced emf in each coil opposes changes in the current.

Categorize We categorize this example as a substitution problem. Because the solenoid is long, we can use the results for an ideal solenoid obtained in Chapter 30.

Find the magnetic flux through each turn of area A in the solenoid, using the expression for the magnetic field from Equation 30.17:

$$\Phi_B = BA = \mu_0 niA = \mu_0 \frac{N}{\ell} iA$$

Substitute this expression into Equation 32.2:

$$L = \frac{N\Phi_B}{i} = \mu_0 \frac{N^2}{\ell} A \quad (32.4)$$

(B) Calculate the inductance of the solenoid if it contains 300 turns, its length is 25.0 cm, and its cross-sectional area is 4.00 cm^2 .

SOLUTION

Substitute numerical values into Equation 32.4:

$$\begin{aligned} L &= (4\pi \times 10^{-7} \text{ T} \cdot \text{m/A}) \frac{300^2}{25.0 \times 10^{-2} \text{ m}} (4.00 \times 10^{-4} \text{ m}^2) \\ &= 1.81 \times 10^{-4} \text{ T} \cdot \text{m}^2/\text{A} = \mathbf{0.181 \text{ mH}} \end{aligned}$$

(C) Calculate the self-induced emf in the solenoid if the current it carries decreases at the rate of 50.0 A/s .

SOLUTION

Substitute $di/dt = -50.0 \text{ A/s}$ and the answer to part (B) into Equation 32.1:

$$\begin{aligned} \mathcal{E}_L &= -L \frac{di}{dt} = -(1.81 \times 10^{-4} \text{ H})(-50.0 \text{ A/s}) \\ &= \mathbf{9.05 \text{ mV}} \end{aligned}$$


The result for part (A) shows that L depends on geometry and is proportional to the square of the number of turns. Because $N = n\ell$, we can also express the result in the form

$$L = \mu_0 \frac{(n\ell)^2}{\ell} A = \mu_0 n^2 A \ell = \mu_0 n^2 V \quad (32.5)$$

where $V = A\ell$ is the interior volume of the solenoid.

32.2 RL Circuits

If a circuit contains a coil such as a solenoid, the inductance of the coil prevents the current in the circuit from increasing or decreasing instantaneously. A circuit

element that has a large inductance is called an **inductor** and has the circuit symbol . We always assume the inductance of the remainder of a circuit is negligible compared with that of the inductor. Keep in mind, however, that even a circuit without a coil has some inductance that can affect the circuit's behavior.

Because the inductance of an inductor results in a back emf, an inductor in a circuit opposes changes in the current in that circuit. The inductor attempts to keep the current the same as it was before the change occurred. If the battery voltage in the circuit is increased so that the current rises, the inductor opposes this change and the rise is not instantaneous. If the battery voltage is decreased, the inductor causes a slow drop in the current rather than an immediate drop. Therefore, the inductor causes the circuit to be “sluggish” as it reacts to changes in the voltage.

Consider the circuit shown in Figure 32.2, which contains a battery of negligible internal resistance. This circuit is an **RL circuit** because the elements connected to the battery are a resistor and an inductor. The curved lines on switch S_2 suggest this switch can never be open; it is always set to either a or b . (If the switch is connected to neither a nor b , any current in the circuit suddenly stops.) Suppose S_2 is set to a and switch S_1 is open for $t < 0$ and then thrown closed at $t = 0$. The current in the circuit begins to increase, and a back emf (Eq. 32.1) that opposes the increasing current is induced in the inductor.

With this point in mind, let's apply Kirchhoff's loop rule to this circuit, traversing the circuit in the clockwise direction:

$$\mathcal{E} - iR - L \frac{di}{dt} = 0 \quad (32.6)$$

where iR is the voltage drop across the resistor. (Kirchhoff's rules were developed for circuits with steady currents, but they can also be applied to a circuit in which the current is changing if we imagine them to represent the circuit at one *instant* of time.) Now let's find a solution to this differential equation, which is similar to that for the RC circuit (see Section 28.4).

A mathematical solution of Equation 32.6 represents the current in the circuit as a function of time. To find this solution, we change variables for convenience, letting $x = (\mathcal{E}/R) - i$, so $dx = -di$. With these substitutions, Equation 32.6 becomes

$$x + \frac{L}{R} \frac{dx}{dt} = 0$$

Rearranging and integrating this last expression gives

$$\int_{x_0}^x \frac{dx}{x} = -\frac{R}{L} \int_0^t dt$$

$$\ln \frac{x}{x_0} = -\frac{R}{L} t$$

where x_0 is the value of x at time $t = 0$. Taking the antilogarithm of this result gives

$$x = x_0 e^{-Rt/L}$$

Because $i = 0$ at $t = 0$, note from the definition of x that $x_0 = \mathcal{E}/R$. Hence, this last expression is equivalent to

$$\frac{\mathcal{E}}{R} - i = \frac{\mathcal{E}}{R} e^{-Rt/L}$$

$$i = \frac{\mathcal{E}}{R} (1 - e^{-Rt/L})$$

This expression shows how the inductor affects the current. The current does not increase instantly to its final equilibrium value when the switch is closed, but instead increases according to an exponential function. If the inductance is removed from the circuit, which corresponds to letting L approach zero, the exponential term

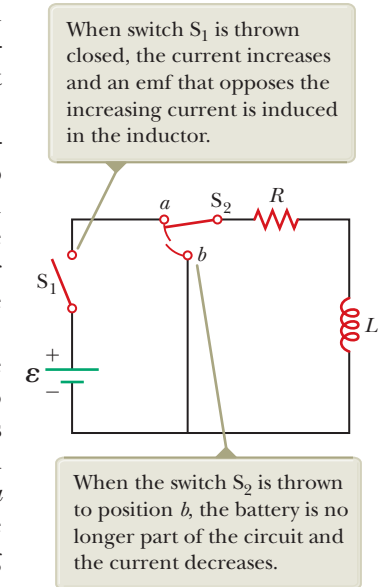


Figure 32.2 An RL circuit. When switch S_2 is in position a , the battery is in the circuit.

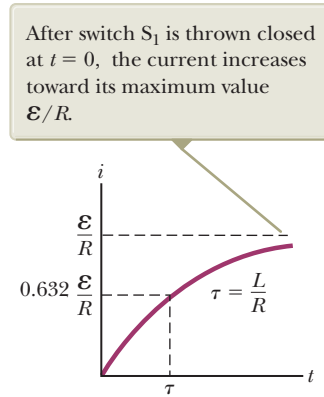


Figure 32.3 Plot of the current versus time for the RL circuit shown in Figure 32.2. The time constant τ is the time interval required for i to reach 63.2% of its maximum value.

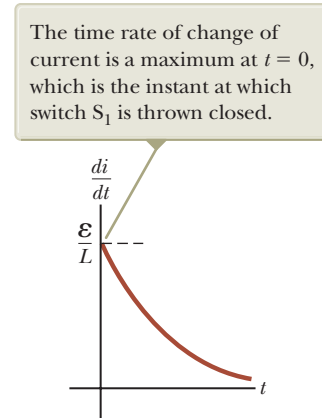


Figure 32.4 Plot of di/dt versus time for the RL circuit shown in Figure 32.2. The rate decreases exponentially with time as i increases toward its maximum value.

becomes zero and there is no time dependence of the current in this case; the current increases instantaneously to its final equilibrium value in the absence of the inductance.

We can also write this expression as

$$i = \frac{\mathcal{E}}{R}(1 - e^{-t/\tau}) \quad (32.7)$$

where the constant τ is the **time constant** of the RL circuit:

$$\tau = \frac{L}{R} \quad (32.8)$$

Physically, τ is the time interval required for the current in the circuit to reach $(1 - e^{-1}) = 0.632 = 63.2\%$ of its final value \mathcal{E}/R . The time constant is a useful parameter for comparing the time responses of various circuits.

Figure 32.3 shows a graph of the current versus time in the RL circuit. Notice that the equilibrium value of the current, which occurs as t approaches infinity, is \mathcal{E}/R . That can be seen by setting di/dt equal to zero in Equation 32.6 and solving for the current i . (At equilibrium, the change in the current is zero.) Therefore, the current initially increases very rapidly and then gradually approaches the equilibrium value \mathcal{E}/R as t approaches infinity.

Let's also investigate the time rate of change of the current. Taking the first time derivative of Equation 32.7 gives

$$\frac{di}{dt} = \frac{\mathcal{E}}{L} e^{-t/\tau} \quad (32.9)$$

This result shows that the time rate of change of the current is a maximum (equal to \mathcal{E}/L) at $t = 0$ and falls off exponentially to zero as t approaches infinity (Fig. 32.4).

Now consider the RL circuit in Figure 32.2 again. Suppose switch S_2 has been set at position a long enough (and switch S_1 remains closed) to allow the current to reach its equilibrium value \mathcal{E}/R . In this situation, the circuit is described by the outer loop in Figure 32.2. If S_2 is thrown from a to b , the circuit is now described by only the right-hand loop in Figure 32.2. Therefore, the battery has been eliminated from the circuit. Setting $\mathcal{E} = 0$ in Equation 32.6 gives

$$iR + L \frac{di}{dt} = 0$$

It is left as a problem (Problem 22) to show that the solution of this differential equation is

$$i = \frac{\mathcal{E}}{R} e^{-t/\tau} = I_i e^{-t/\tau} \quad (32.10)$$

where \mathcal{E} is the emf of the battery and $I_i = \mathcal{E}/R$ is the initial current at the instant the switch is thrown to b .

If the circuit did not contain an inductor, the current would immediately decrease to zero when the battery is removed. When the inductor is present, it opposes the decrease in the current and causes the current to decrease exponentially. A graph of the current in the circuit versus time (Fig. 32.5) shows that the current is continuously decreasing with time.

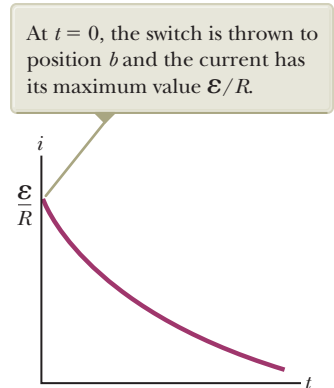


Figure 32.5 Current versus time for the right-hand loop of the circuit shown in Figure 32.2. For $t < 0$, switch S_2 is at position a .

- Quick Quiz 32.2** Consider the circuit in Figure 32.2 with S_1 open and S_2 at position a . Switch S_1 is now thrown closed. (i) At the instant it is closed, across which circuit element is the voltage equal to the emf of the battery? (a) the resistor (b) the inductor (c) both the inductor and resistor (ii) After a very long time, across which circuit element is the voltage equal to the emf of the battery?
- Choose from among the same answers.

Example 32.2 Time Constant of an RL Circuit

Consider the circuit in Figure 32.2 again. Suppose the circuit elements have the following values: $\mathcal{E} = 12.0$ V, $R = 6.00$ Ω , and $L = 30.0$ mH.

(A) Find the time constant of the circuit.

SOLUTION

Conceptualize You should understand the operation and behavior of the circuit in Figure 32.2 from the discussion in this section.

Categorize We evaluate the results using equations developed in this section, so this example is a substitution problem.

Evaluate the time constant from Equation 32.8:

$$\tau = \frac{L}{R} = \frac{30.0 \times 10^{-3} \text{ H}}{6.00 \Omega} = 5.00 \text{ ms}$$

(B) Switch S_2 is at position a , and switch S_1 is thrown closed at $t = 0$. Calculate the current in the circuit at $t = 2.00$ ms.

SOLUTION

Evaluate the current at $t = 2.00$ ms from Equation 32.7:

$$\begin{aligned} i &= \frac{\mathcal{E}}{R} (1 - e^{-t/\tau}) = \frac{12.0 \text{ V}}{6.00 \Omega} (1 - e^{-2.00 \text{ ms}/5.00 \text{ ms}}) = 2.00 \text{ A} (1 - e^{-0.400}) \\ &= 0.659 \text{ A} \end{aligned}$$

(C) Compare the potential difference across the resistor with that across the inductor.

SOLUTION

At the instant the switch is closed, there is no current and therefore no potential difference across the resistor. At this instant, the battery voltage appears entirely across the inductor in the form of a back emf of 12.0 V as the inductor tries to maintain the zero-current condition. (The top end of the inductor in Fig. 32.2 is at a higher electric potential than the bottom end.) As time passes, the emf across the inductor decreases and the current in the resistor (and hence the voltage across it) increases as shown in Figure 32.6 (page 976). The sum of the two voltages at all times is 12.0 V.

WHAT IF? In Figure 32.6, the voltages across the resistor and inductor are equal at 3.4 ms. What if you wanted to delay the condition in which the voltages are equal to some later instant, such as $t = 10.0$ ms? Which parameter, L or R , would require the least adjustment, in terms of a percentage change, to achieve that?

continued

Answer Figure 32.6 shows that the voltages are equal when the voltage across the inductor has fallen to half its original value. Therefore, the time interval required for the voltages to become equal is the *half-life* $t_{1/2}$ of the decay. We introduced the half-life in the What If? section of Example 28.10 to describe the exponential decay in RL circuits, where $t_{1/2} = 0.693\tau$.

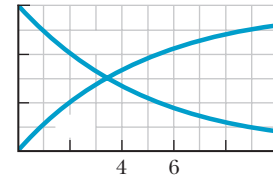
From the desired half-life of 10.0 ms, use the result from Example 28.10 to find the time constant of the circuit:

Hold R fixed and find the value of L that gives this time constant:

Now hold L fixed and find the appropriate value of R :

The change in R corresponds to a 65% decrease compared with the initial resistance. The change in L represents a 188% increase in inductance! Therefore, a much smaller percentage adjustment in L can achieve the desired effect than would an adjustment in R .

Figure 32.6 (Example 32.2) The time behavior of the voltages across the resistor and inductor in Figure 32.2 given the values provided in this example.



$$\tau = \frac{10.0 \text{ ms}}{0.693} = 14.4 \text{ ms}$$

$$\tau = \frac{L}{R} \Rightarrow L = \tau R = (14.4 \text{ ms}) \left(\frac{30.0 \text{ V}}{3.50 \text{ A}} \right) = 12.3 \text{ mH}$$

$$\tau = \frac{L}{R} \Rightarrow R = \frac{L}{\tau} = \frac{12.3 \text{ mH}}{14.4 \text{ ms}} = 0.854 \text{ } \Omega$$

Pitfall Prevention 32.1

Capacitors, Resistors, and Inductors Store Energy Differently

Different energy-storage mechanisms are at work in capacitors, inductors, and resistors. A charged capacitor stores energy as electrical potential energy. An inductor stores energy as what we could call magnetic potential energy when it carries current. Energy delivered to a resistor is transformed to internal energy.

32.3 Energy in a Magnetic Field

A battery in a circuit containing an inductor must provide more energy than one in a circuit without the inductor. Consider Figure 32.2 with switch S in position 1. When switch S is thrown closed, part of the energy supplied by the battery appears as internal energy in the resistance in the circuit, and the remaining energy is stored in the magnetic field of the inductor. Multiplying each term in Equation 32.6 by dt and rearranging the expression gives

$$Li \frac{di}{dt} = \mathcal{E}i - i^2R \tag{32.11}$$

Recognizing $\mathcal{E}i$ as the rate at which energy is supplied by the battery and i^2R as the rate at which energy is delivered to the resistor, we see that $Li \frac{di}{dt}$ must represent the rate at which energy is being stored in the inductor. If U is the energy stored in the inductor at any time, we can write the rate $\frac{dU}{dt}$ at which energy is stored as

$$\frac{dU}{dt} = Li \frac{di}{dt}$$

To find the total energy stored in the inductor at any instant, let's rewrite this expression as $dU = Li di$ and integrate:

$$dU = Li di \Rightarrow U = \int_0^i Li di = \frac{1}{2} Li^2 \tag{32.12}$$

Energy stored in an inductor

where L is constant and has been removed from the integral. Equation 32.12 represents the energy stored in the magnetic field of the inductor when the current is i . It is similar in form to Equation 26.11 for the energy stored in the electric field of a capacitor, $U = \frac{1}{2} C \mathcal{E}^2$. In either case, energy is required to establish a field.

We can also determine the energy density of a magnetic field. For simplicity, consider a solenoid whose inductance is given by Equation 32.5:

The magnetic field of a solenoid is given by Equation 30.17:

$$B = \mu_0 ni$$

Substituting the expression for L and $i = B/\mu_0 n$ into Equation 32.12 gives

$$U_B = \frac{1}{2} Li^2 = \frac{1}{2} \mu_0 n^2 V \left(\frac{B}{\mu_0 n} \right)^2 = \frac{B^2}{2\mu_0} V \quad (32.13)$$

The magnetic energy density, or the energy stored per unit volume in the magnetic field of the inductor, is $u_B = U_B/V$, or

$$u_B = \frac{B^2}{2\mu_0} \quad (32.14) \quad \leftarrow \text{Magnetic energy density}$$

Although this expression was derived for the special case of a solenoid, it is valid for any region of space in which a magnetic field exists. Equation 32.14 is similar in form to Equation 26.13 for the energy per unit volume stored in an electric field, $u_E = \frac{1}{2} \epsilon_0 E^2$. In both cases, the energy density is proportional to the square of the field magnitude.

- Quick Quiz 32.3** You are performing an experiment that requires the highest-possible magnetic energy density in the interior of a very long current-carrying solenoid. Which of the following adjustments increases the energy density? (More than one choice may be correct.) (a) increasing the number of turns per unit length on the solenoid (b) increasing the cross-sectional area of the solenoid (c) increasing only the length of the solenoid while keeping the number of turns per unit length fixed (d) increasing the current in the solenoid

Example 32.3 What Happens to the Energy in the Inductor? AM

Consider once again the RL circuit shown in Figure 32.2, with switch S_2 at position a and the current having reached its steady-state value. When S_2 is thrown to position b , the current in the right-hand loop decays exponentially with time according to the expression $i = I_i e^{-t/\tau}$, where $I_i = \mathcal{E}/R$ is the initial current in the circuit and $\tau = L/R$ is the time constant. Show that all the energy initially stored in the magnetic field of the inductor appears as internal energy in the resistor as the current decays to zero.

SOLUTION

Conceptualize Before S_2 is thrown to b , energy is being delivered at a constant rate to the resistor from the battery and energy is stored in the magnetic field of the inductor. After $t = 0$, when S_2 is thrown to b , the battery can no longer provide energy and energy is delivered to the resistor only from the inductor.

Categorize We model the right-hand loop of the circuit as an *isolated system* so that energy is transferred between components of the system but does not leave the system.

Analyze We begin by evaluating the energy delivered to the resistor, which appears as internal energy in the resistor.

Begin with Equation 27.22 and recognize that the rate of change of internal energy in the resistor is the power delivered to the resistor:

$$\frac{dE_{\text{int}}}{dt} = P = i^2 R$$

Substitute the current given by Equation 32.10 into this equation:

$$\frac{dE_{\text{int}}}{dt} = i^2 R = (I_i e^{-Rt/L})^2 R = I_i^2 R e^{-2Rt/L}$$

Solve for dE_{int} and integrate this expression over the limits $t = 0$ to $t \rightarrow \infty$:

$$E_{\text{int}} = \int_0^{\infty} I_i^2 R e^{-2Rt/L} dt = I_i^2 R \int_0^{\infty} e^{-2Rt/L} dt$$

The value of the definite integral can be shown to be $L/2R$ (see Problem 36). Use this result to evaluate E_{int} :

$$E_{\text{int}} = I_i^2 R \left(\frac{L}{2R} \right) = \frac{1}{2} LI_i^2$$

continued

32.3 continued

Finalize This result is equal to the initial energy stored in the magnetic field of the inductor, given by Equation 32.12, as we set out to prove.

Example 32.4 The Coaxial Cable

Coaxial cables are often used to connect electrical devices, such as your video system, and in receiving signals in television cable systems. Model a long coaxial cable as a thin, cylindrical conducting shell of radius b concentric with a solid cylinder of radius a as in Figure 32.7. The conductors carry the same current I in opposite directions. Calculate the inductance L of a length ℓ of this cable.

SOLUTION

Conceptualize Consider Figure 32.7. Although we do not have a visible coil in this geometry, imagine a thin, radial slice of the coaxial cable such as the light gold rectangle in Figure 32.7. If the inner and outer conductors are connected at the ends of the cable (above and below the figure), this slice represents one large conducting loop. The current in the loop sets up a magnetic field between the inner and outer conductors that passes through this loop. If the current changes, the magnetic field changes and the induced emf opposes the original change in the current in the conductors.

Categorize We categorize this situation as one in which we must return to the fundamental definition of inductance, Equation 32.2.

Analyze We must find the magnetic flux through the light gold rectangle in Figure 32.7. Ampère's law (see Section 30.3) tells us that the magnetic field in the region between the conductors is due to the inner conductor alone and that its magnitude is $B = \mu_0 i / 2\pi r$, where r is measured from the common center of the cylinders. A sample circular field line is shown in Figure 32.7, along with a field vector tangent to the field line. The magnetic field is zero outside the outer shell because the net current passing through the area enclosed by a circular path surrounding the cable is zero; hence, from Ampère's law, $\oint \vec{B} \cdot d\vec{s} = 0$.

The magnetic field is perpendicular to the light gold rectangle of length ℓ and width $b - a$, the cross section of interest. Because the magnetic field varies with radial position across this rectangle, we must use calculus to find the total magnetic flux.

Divide the light gold rectangle into strips of width dr such as the darker strip in Figure 32.7. Evaluate the magnetic flux through such a strip:

$$d\Phi_B = B dA = B \ell dr$$

Substitute for the magnetic field and integrate over the entire light gold rectangle:

$$\Phi_B = \int_a^b \frac{\mu_0 i}{2\pi r} \ell dr = \frac{\mu_0 i \ell}{2\pi} \int_a^b \frac{dr}{r} = \frac{\mu_0 i \ell}{2\pi} \ln \left(\frac{b}{a} \right)$$

Use Equation 32.2 to find the inductance of the cable:

$$L = \frac{\Phi_B}{i} = \frac{\mu_0 \ell}{2\pi} \ln \left(\frac{b}{a} \right)$$

Finalize The inductance depends only on geometric factors related to the cable. It increases if ℓ increases, if b increases, or if a decreases. This result is consistent with our conceptualization: any of these changes increases the size of the loop represented by our radial slice and through which the magnetic field passes, increasing the inductance.

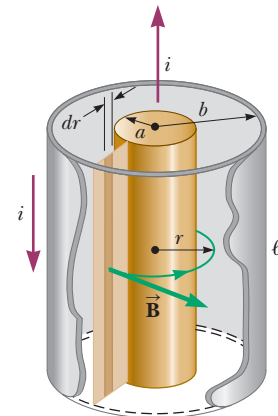


Figure 32.7 (Example 32.4) Section of a long coaxial cable. The inner and outer conductors carry equal currents in opposite directions.

32.4 Mutual Inductance

Very often, the magnetic flux through the area enclosed by a circuit varies with time because of time-varying currents in nearby circuits. This condition induces an

emf through a process known as *mutual induction*, so named because it depends on the interaction of two circuits.

Consider the two closely wound coils of wire shown in cross-sectional view in Figure 32.8. The current i_1 in coil 1, which has N_1 turns, creates a magnetic field. Some of the magnetic field lines pass through coil 2, which has N_2 turns. The magnetic flux caused by the current in coil 1 and passing through coil 2 is represented by Φ_{12} . In analogy to Equation 32.2, we can identify the **mutual inductance** M_{12} of coil 2 with respect to coil 1:

$$M_{12} = \frac{N_2 \Phi_{12}}{i_1} \quad (32.15)$$

Mutual inductance depends on the geometry of both circuits and on their orientation with respect to each other. As the circuit separation distance increases, the mutual inductance decreases because the flux linking the circuits decreases.

If the current i_1 varies with time, we see from Faraday's law and Equation 32.15 that the emf induced by coil 1 in coil 2 is

$$\mathcal{E}_2 = -N_2 \frac{d\Phi_{12}}{dt} = -N_2 \frac{d}{dt} \left(\frac{M_{12} i_1}{N_2} \right) = -M_{12} \frac{di_1}{dt} \quad (32.16)$$

In the preceding discussion, it was assumed the current is in coil 1. Let's also imagine a current i_2 in coil 2. The preceding discussion can be repeated to show that there is a mutual inductance M_{21} . If the current i_2 varies with time, the emf induced by coil 2 in coil 1 is

$$\mathcal{E}_1 = -M_{21} \frac{di_2}{dt} \quad (32.17)$$

In mutual induction, the emf induced in one coil is always proportional to the rate at which the current in the other coil is changing. Although the proportionality constants M_{12} and M_{21} have been treated separately, it can be shown that they are equal. Therefore, with $M_{12} = M_{21} = M$, Equations 32.16 and 32.17 become

$$\mathcal{E}_2 = -M \frac{di_1}{dt} \quad \text{and} \quad \mathcal{E}_1 = -M \frac{di_2}{dt}$$

These two equations are similar in form to Equation 32.1 for the self-induced emf $\mathcal{E} = -L (di/dt)$. The unit of mutual inductance is the henry.

Quick Quiz 32.4 In Figure 32.8, coil 1 is moved closer to coil 2, with the orientation of both coils remaining fixed. Because of this movement, the mutual induction of the two coils (a) increases, (b) decreases, or (c) is unaffected.

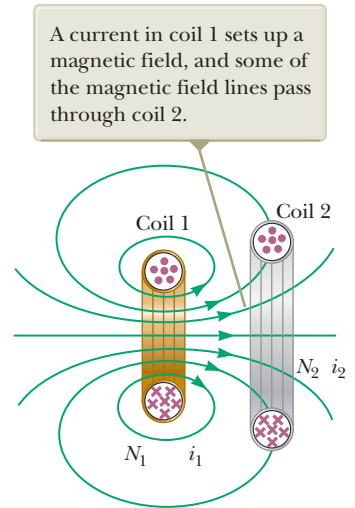


Figure 32.8 A cross-sectional view of two adjacent coils.

Example 32.5 "Wireless" Battery Charger

An electric toothbrush has a base designed to hold the toothbrush handle when not in use. As shown in Figure 32.9a, the handle has a cylindrical hole that fits loosely over a matching cylinder on the base. When the handle is placed on the base, a changing current in a solenoid inside the base cylinder induces a current in a coil inside the handle. This induced current charges the battery in the handle.

We can model the base as a solenoid of length ℓ with N_B turns (Fig. 32.9b), carrying a current i , and having a cross-sectional area A . The handle coil contains N_H turns and completely surrounds the base coil. Find the mutual inductance of the system.

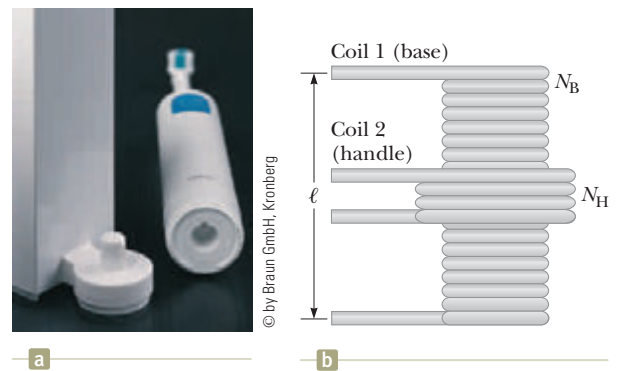


Figure 32.9 (Example 32.5) (a) This electric toothbrush uses the mutual induction of solenoids as part of its battery-charging system. (b) A coil of N_H turns wrapped around the center of a solenoid of N_B turns.

continued

32.5 continued

SOLUTION

Conceptualize Be sure you can identify the two coils in the situation and understand that a changing current in one coil induces a current in the second coil.

Categorize We will determine the result using concepts discussed in this section, so we categorize this example as a substitution problem.

Use Equation 30.17 to express the magnetic field in the interior of the base solenoid:

$$B = \mu_0 \frac{N_B}{\ell} i$$

Find the mutual inductance, noting that the magnetic flux Φ_{BH} through the handle's coil caused by the magnetic field of the base coil is BA :

$$M = \frac{N_H \Phi_{BH}}{i} = \frac{N_H BA}{i} = \mu_0 \frac{N_B N_H}{\ell} A$$

Wireless charging is used in a number of other “cordless” devices. One significant example is the inductive charging used by some manufacturers of electric cars that avoids direct metal-to-metal contact between the car and the charging apparatus.

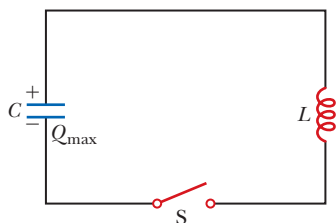


Figure 32.10 A simple LC circuit. The capacitor has an initial charge Q_{\max} , and the switch is open for $t < 0$ and then closed at $t = 0$.

32.5 Oscillations in an LC Circuit

When a capacitor is connected to an inductor as illustrated in Figure 32.10, the combination is an **LC circuit**. If the capacitor is initially charged and the switch is then closed, both the current in the circuit and the charge on the capacitor oscillate between maximum positive and negative values. If the resistance of the circuit is zero, no energy is transformed to internal energy. In the following analysis, the resistance in the circuit is neglected. We also assume an idealized situation in which energy is not radiated away from the circuit. This radiation mechanism is discussed in Chapter 34.

Assume the capacitor has an initial charge Q_{\max} (the maximum charge) and the switch is open for $t < 0$ and then closed at $t = 0$. Let's investigate what happens from an energy viewpoint.

When the capacitor is fully charged, the energy U in the circuit is stored in the capacitor's electric field and is equal to $Q_{\max}^2/2C$ (Eq. 26.11). At this time, the current in the circuit is zero; therefore, no energy is stored in the inductor. After the switch is closed, the rate at which charges leave or enter the capacitor plates (which is also the rate at which the charge on the capacitor changes) is equal to the current in the circuit. After the switch is closed and the capacitor begins to discharge, the energy stored in its electric field decreases. The capacitor's discharge represents a current in the circuit, and some energy is now stored in the magnetic field of the inductor. Therefore, energy is transferred from the electric field of the capacitor to the magnetic field of the inductor. When the capacitor is fully discharged, it stores no energy. At this time, the current reaches its maximum value and all the energy in the circuit is stored in the inductor. The current continues in the same direction, decreasing in magnitude, with the capacitor eventually becoming fully charged again but with the polarity of its plates now opposite the initial polarity. This process is followed by another discharge until the circuit returns to its original state of maximum charge Q_{\max} and the plate polarity shown in Figure 32.10. The energy continues to oscillate between inductor and capacitor.

The oscillations of the LC circuit are an electromagnetic analog to the mechanical oscillations of the particle in simple harmonic motion studied in Chapter 15. Much of what was discussed there is applicable to LC oscillations. For example, we investigated the effect of driving a mechanical oscillator with an external force,

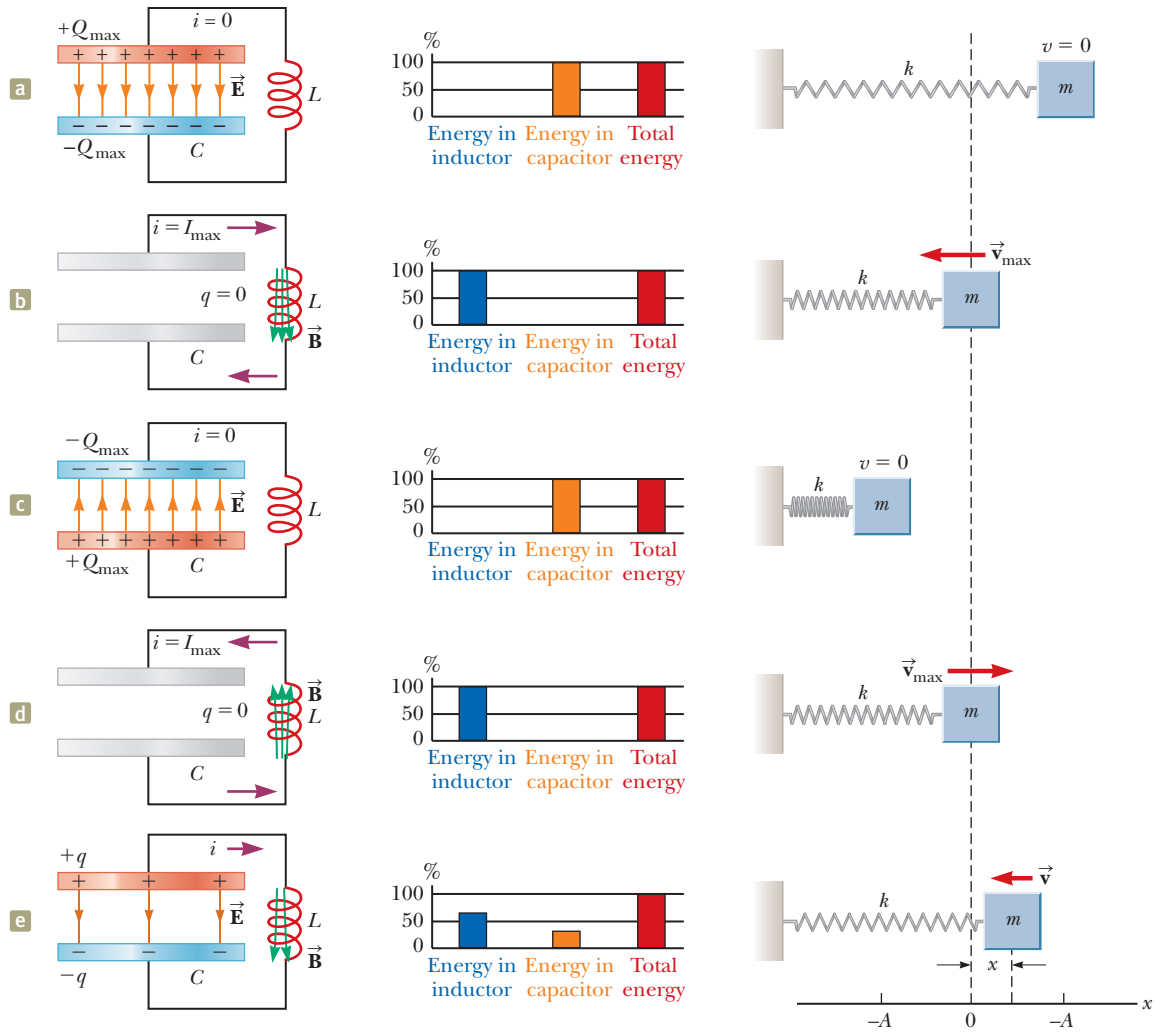


Figure 32.11 Energy transfer in a resistanceless, nonradiating LC circuit. The capacitor has a charge Q_{\max} at $t = 0$, the instant at which the switch in Figure 32.10 is closed. The mechanical analog of this circuit is the particle in simple harmonic motion, represented by the block–spring system at the right of the figure. (a)–(d) At these special instants, all of the energy in the circuit resides in one of the circuit elements. (e) At an arbitrary instant, the energy is split between the capacitor and the inductor.

which leads to the phenomenon of *resonance*. The same phenomenon is observed in the LC circuit. (See Section 33.7.)

A representation of the energy transfer in an LC circuit is shown in Figure 32.11. As mentioned, the behavior of the circuit is analogous to that of the particle in simple harmonic motion studied in Chapter 15. For example, consider the block–spring system shown in Figure 15.10. The oscillations of this system are shown at the right of Figure 32.11. The potential energy $\frac{1}{2}kx^2$ stored in the stretched spring is analogous to the potential energy $Q_{\max}^2/2C$ stored in the capacitor in Figure 32.11. The kinetic energy $\frac{1}{2}mv^2$ of the moving block is analogous to the magnetic energy $\frac{1}{2}Li^2$ stored in the inductor, which requires the presence of moving charges. In Figure 32.11a, all the energy is stored as electric potential energy in the capacitor at $t = 0$ (because $i = 0$), just as all the energy in a block–spring system is initially stored as potential energy in the spring if it is stretched and released at $t = 0$. In Figure 32.11b, all the energy is stored as magnetic energy $\frac{1}{2}LI_{\max}^2$ in the inductor, where I_{\max} is the maximum current. Figures 32.11c and 32.11d show subsequent quarter-cycle situations in which the energy is all electric or all magnetic. At intermediate points, part of the energy is electric and part is magnetic.

Consider some arbitrary time t after the switch is closed so that the capacitor has a charge $q < Q_{\max}$ and the current is $i < I_{\max}$. At this time, both circuit elements store energy, as shown in Figure 32.11e, but the sum of the two energies must equal the total initial energy U stored in the fully charged capacitor at $t = 0$:

Total energy stored in
an LC circuit

$$U = U_E + U_B = \frac{q^2}{2C} + \frac{1}{2}Li^2 = \frac{Q_{\max}^2}{2C} \quad (32.18)$$

Because we have assumed the circuit resistance to be zero and we ignore electromagnetic radiation, no energy is transformed to internal energy and none is transferred out of the system of the circuit. Therefore, with these assumptions, the system of the circuit is isolated: *the total energy of the system must remain constant in time*. We describe the constant energy of the system mathematically by setting $dU/dt = 0$. Therefore, by differentiating Equation 32.18 with respect to time while noting that q and i vary with time gives

$$\frac{dU}{dt} = \frac{d}{dt} \left(\frac{q^2}{2C} + \frac{1}{2}Li^2 \right) = \frac{q}{C} \frac{dq}{dt} + Li \frac{di}{dt} = 0 \quad (32.19)$$

We can reduce this result to a differential equation in one variable by remembering that the current in the circuit is equal to the rate at which the charge on the capacitor changes: $i = dq/dt$. It then follows that $di/dt = d^2q/dt^2$. Substitution of these relationships into Equation 32.19 gives

$$\begin{aligned} \frac{q}{C} + L \frac{d^2q}{dt^2} &= 0 \\ \frac{d^2q}{dt^2} &= -\frac{1}{LC}q \end{aligned} \quad (32.20)$$

Let's solve for q by noting that this expression is of the same form as the analogous Equations 15.3 and 15.5 for a particle in simple harmonic motion:

$$\frac{d^2x}{dt^2} = -\frac{k}{m}x = -\omega^2x$$

where k is the spring constant, m is the mass of the block, and $\omega = \sqrt{k/m}$. The solution of this mechanical equation has the general form (Eq. 15.6):

$$x = A \cos(\omega t + \phi)$$

where A is the amplitude of the simple harmonic motion (the maximum value of x), ω is the angular frequency of this motion, and ϕ is the phase constant; the values of A and ϕ depend on the initial conditions. Because Equation 32.20 is of the same mathematical form as the differential equation of the simple harmonic oscillator, it has the solution

$$q = Q_{\max} \cos(\omega t + \phi) \quad (32.21)$$

where Q_{\max} is the maximum charge of the capacitor and the angular frequency ω is

$$\omega = \frac{1}{\sqrt{LC}} \quad (32.22)$$

Note that the angular frequency of the oscillations depends solely on the inductance and capacitance of the circuit. Equation 32.22 gives the *natural frequency* of oscillation of the LC circuit.

Because q varies sinusoidally with time, the current in the circuit also varies sinusoidally. We can show that by differentiating Equation 32.21 with respect to time:

$$i = \frac{dq}{dt} = -\omega Q_{\max} \sin(\omega t + \phi) \quad (32.23)$$

Charge as a function of time
for an ideal LC circuit

Angular frequency of
oscillation in an LC circuit

Current as a function of
time for an ideal LC current

To determine the value of the phase angle ϕ , let's examine the initial conditions, which in our situation require that at $t = 0$, $i = 0$, and $q = Q_{\max}$. Setting $i = 0$ at $t = 0$ in Equation 32.23 gives

$$0 = -\omega Q_{\max} \sin \phi$$

which shows that $\phi = 0$. This value for ϕ also is consistent with Equation 32.21 and the condition that $q = Q_{\max}$ at $t = 0$. Therefore, in our case, the expressions for q and i are

$$q = Q_{\max} \cos \omega t \quad (32.24)$$

$$i = -\omega Q_{\max} \sin \omega t = -I_{\max} \sin \omega t \quad (32.25)$$

Graphs of q versus t and i versus t are shown in Figure 32.12. The charge on the capacitor oscillates between the extreme values Q_{\max} and $-Q_{\max}$, and the current oscillates between I_{\max} and $-I_{\max}$. Furthermore, the current is 90° out of phase with the charge. That is, when the charge is a maximum, the current is zero, and when the charge is zero, the current has its maximum value.

Let's return to the energy discussion of the LC circuit. Substituting Equations 32.24 and 32.25 in Equation 32.18, we find that the total energy is

$$U = U_E + U_B = \frac{Q_{\max}^2}{2C} \cos^2 \omega t + \frac{1}{2} L I_{\max}^2 \sin^2 \omega t \quad (32.26)$$

This expression contains all the features described qualitatively at the beginning of this section. It shows that the energy of the LC circuit continuously oscillates between energy stored in the capacitor's electric field and energy stored in the inductor's magnetic field. When the energy stored in the capacitor has its maximum value $Q_{\max}^2/2C$, the energy stored in the inductor is zero. When the energy stored in the inductor has its maximum value $\frac{1}{2} L I_{\max}^2$, the energy stored in the capacitor is zero.

Plots of the time variations of U_E and U_B are shown in Figure 32.13. The sum $U_E + U_B$ is a constant and is equal to the total energy $Q_{\max}^2/2C$, or $\frac{1}{2} L I_{\max}^2$. Analytical verification is straightforward. The amplitudes of the two graphs in Figure 32.13 must be equal because the maximum energy stored in the capacitor (when $I = 0$) must equal the maximum energy stored in the inductor (when $q = 0$). This equality is expressed mathematically as

$$\frac{Q_{\max}^2}{2C} = \frac{L I_{\max}^2}{2}$$

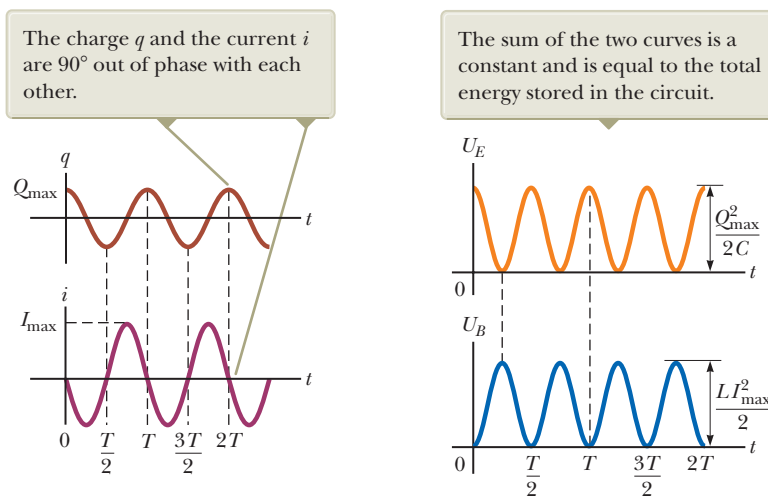


Figure 32.12 Graphs of charge versus time and current versus time for a resistanceless, nonradiating LC circuit.

Figure 32.13 Plots of U_E versus t and U_B versus t for a resistanceless, nonradiating LC circuit.

Using this expression in Equation 32.26 for the total energy gives

$$U = \frac{Q_{\max}^2}{2C} (\cos^2 \omega t + \sin^2 \omega t) = \frac{Q_{\max}^2}{2C} \quad (32.27)$$

because $\cos^2 \omega t + \sin^2 \omega t = 1$.

In our idealized situation, the oscillations in the circuit persist indefinitely; the total energy U of the circuit, however, remains constant only if energy transfers and transformations are neglected. In actual circuits, there is always some resistance and some energy is therefore transformed to internal energy. We mentioned at the beginning of this section that we are also ignoring radiation from the circuit. In reality, radiation is inevitable in this type of circuit, and the total energy in the circuit continuously decreases as a result of this process.

Quick Quiz 32.5 (i) At an instant of time during the oscillations of an LC circuit, the current is at its maximum value. At this instant, what happens to the voltage across the capacitor? (a) It is different from that across the inductor. (b) It is zero. (c) It has its maximum value. (d) It is impossible to determine. (ii) Now consider an instant when the current is momentarily zero. From the same choices, describe the magnitude of the voltage across the capacitor at this instant.

Example 32.6 Oscillations in an LC Circuit

In Figure 32.14, the battery has an emf of 12.0 V, the inductance is 2.81 mH, and the capacitance is 9.00 pF. The switch has been set to position a for a long time so that the capacitor is charged. The switch is then thrown to position b , removing the battery from the circuit and connecting the capacitor directly across the inductor.

(A) Find the frequency of oscillation of the circuit.

SOLUTION

Conceptualize When the switch is thrown to position b , the active part of the circuit is the right-hand loop, which is an LC circuit.

Categorize We use equations developed in this section, so we categorize this example as a substitution problem.

Use Equation 32.22 to find the frequency:

$$f = \frac{\omega}{2\pi} = \frac{1}{2\pi\sqrt{LC}}$$

Substitute numerical values:

$$f = \frac{1}{2\pi[(2.81 \times 10^{-3} \text{ H})(9.00 \times 10^{-12} \text{ F})]^{1/2}} = 1.00 \times 10^6 \text{ Hz}$$

(B) What are the maximum values of charge on the capacitor and current in the circuit?

SOLUTION

Find the initial charge on the capacitor, which equals the maximum charge:

$$Q_{\max} = C\Delta V = (9.00 \times 10^{-12} \text{ F})(12.0 \text{ V}) = 1.08 \times 10^{-10} \text{ C}$$

Use Equation 32.25 to find the maximum current from the maximum charge:

$$I_{\max} = \omega Q_{\max} = 2\pi f Q_{\max} = (2\pi \times 10^6 \text{ s}^{-1})(1.08 \times 10^{-10} \text{ C}) \\ = 6.79 \times 10^{-4} \text{ A}$$

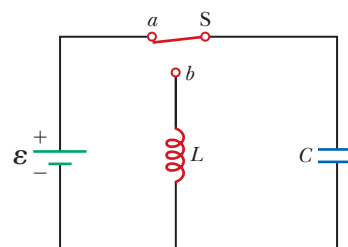


Figure 32.14 (Example 32.6) First the capacitor is fully charged with the switch set to position a . Then the switch is thrown to position b , and the battery is no longer in the circuit.

32.6 The RLC Circuit

Let's now turn our attention to a more realistic circuit consisting of a resistor, an inductor, and a capacitor connected in series as shown in Figure 32.15. We assume

the resistance of the resistor represents all the resistance in the circuit. Suppose the switch is at position a so that the capacitor has an initial charge Q_{\max} . The switch is now thrown to position b . At this instant, the total energy stored in the capacitor and inductor is $Q_{\max}^2/2C$. This total energy, however, is no longer constant as it was in the LC circuit because the resistor causes transformation to internal energy. (We continue to ignore electromagnetic radiation from the circuit in this discussion.) Because the rate of energy transformation to internal energy within a resistor is i^2R ,

$$\frac{dU}{dt} = -i^2R$$

where the negative sign signifies that the energy U of the circuit is decreasing in time. Substituting $U = U_E + U_B$ gives

$$\frac{q}{C} \frac{dq}{dt} + Li \frac{di}{dt} = -i^2R \quad (32.28)$$

To convert this equation into a form that allows us to compare the electrical oscillations with their mechanical analog, we first use $i = dq/dt$ and move all terms to the left-hand side to obtain

$$Li \frac{d^2q}{dt^2} + i^2R + \frac{q}{C} i = 0$$

Now divide through by i :

$$L \frac{d^2q}{dt^2} + iR + \frac{q}{C} = 0$$

$$L \frac{d^2q}{dt^2} + R \frac{dq}{dt} + \frac{q}{C} = 0 \quad (32.29)$$

The RLC circuit is analogous to the damped harmonic oscillator discussed in Section 15.6 and illustrated in Figure 15.20. The equation of motion for a damped block–spring system is, from Equation 15.31,

$$m \frac{d^2x}{dt^2} + b \frac{dx}{dt} + kx = 0 \quad (32.30)$$

Comparing Equations 32.29 and 32.30, we see that q corresponds to the position x of the block at any instant, L to the mass m of the block, R to the damping coefficient b , and C to $1/k$, where k is the force constant of the spring. These and other relationships are listed in Table 32.1 on page 986.

Because the analytical solution of Equation 32.29 is cumbersome, we give only a qualitative description of the circuit behavior. In the simplest case, when $R = 0$, Equation 32.29 reduces to that of a simple LC circuit as expected, and the charge and the current oscillate sinusoidally in time. This situation is equivalent to removing all damping in the mechanical oscillator.

When R is small, a situation that is analogous to light damping in the mechanical oscillator, the solution of Equation 32.29 is

$$q = Q_{\max} e^{-Rt/2L} \cos \omega_d t \quad (32.31)$$

where ω_d , the angular frequency at which the circuit oscillates, is given by

$$\omega_d = \left[\frac{1}{LC} - \left(\frac{R}{2L} \right)^2 \right]^{1/2} \quad (32.32)$$

That is, the value of the charge on the capacitor undergoes a damped harmonic oscillation in analogy with a block–spring system moving in a viscous medium. Equation 32.32 shows that when $R \ll \sqrt{4L/C}$ (so that the second term in the

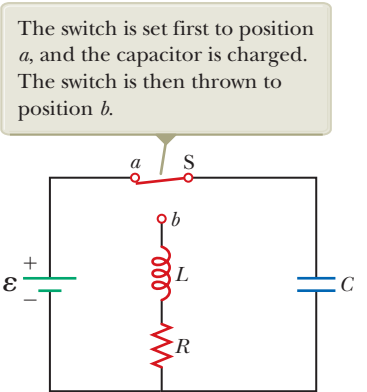


Figure 32.15 A series RLC circuit.

Table 32.1 Analogies Between the *RLC* Circuit and the Particle in Simple Harmonic Motion

<i>RLC</i> Circuit		One-Dimensional Particle in Simple Harmonic Motion
Charge	$q \leftrightarrow x$	Position
Current	$i \leftrightarrow v_x$	Velocity
Potential difference	$\Delta V \leftrightarrow F_x$	Force
Resistance	$R \leftrightarrow b$	Viscous damping coefficient
Capacitance	$C \leftrightarrow 1/k$	(k = spring constant)
Inductance	$L \leftrightarrow m$	Mass
Current = time derivative of charge	$i = \frac{dq}{dt} \leftrightarrow v_x = \frac{dx}{dt}$	Velocity = time derivative of position
Rate of change of current = second time derivative of charge	$\frac{di}{dt} = \frac{d^2q}{dt^2} \leftrightarrow a_x = \frac{dv_x}{dt} = \frac{d^2x}{dt^2}$	Acceleration = second time derivative of position
Energy in inductor	$U_B = \frac{1}{2}Li^2 \leftrightarrow K = \frac{1}{2}mv^2$	Kinetic energy of moving object
Energy in capacitor	$U_E = \frac{1}{2}\frac{q^2}{C} \leftrightarrow U = \frac{1}{2}kx^2$	Potential energy stored in a spring
Rate of energy loss due to resistance	$i^2R \leftrightarrow bv^2$	Rate of energy loss due to friction
<i>RLC</i> circuit	$L\frac{d^2q}{dt^2} + R\frac{dq}{dt} + \frac{q}{C} = 0 \leftrightarrow m\frac{d^2x}{dt^2} + b\frac{dx}{dt} + kx = 0$	Damped object on a spring

brackets is much smaller than the first), the frequency ω_d of the damped oscillator is close to that of the undamped oscillator, $1/\sqrt{LC}$. Because $i = dq/dt$, it follows that the current also undergoes damped harmonic oscillation. A plot of the charge versus time for the damped oscillator is shown in Figure 32.16a, and an oscilloscope trace for a real *RLC* circuit is shown in Figure 32.16b. The maximum value of q decreases after each oscillation, just as the amplitude of a damped block–spring system decreases in time.

For larger values of R , the oscillations damp out more rapidly; in fact, there exists a critical resistance value $R_c = \sqrt{4L/C}$ above which no oscillations occur. A system with $R = R_c$ is said to be *critically damped*. When R exceeds R_c , the system is said to be *overdamped*.

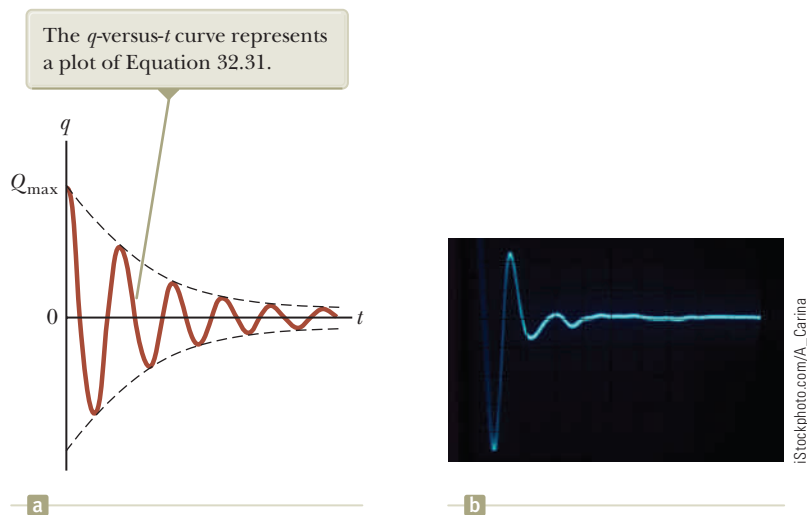


Figure 32.16 (a) Charge versus time for a damped *RLC* circuit. The charge decays in this way when $R < \sqrt{4L/C}$. (b) Oscilloscope pattern showing the decay in the oscillations of an *RLC* circuit.

Summary

Concepts and Principles

When the current in a loop of wire changes with time, an emf is induced in the loop according to Faraday's law. The **self-induced emf** is

$$\mathcal{E}_L = -L \frac{di}{dt} \quad (32.1)$$

where L is the **inductance** of the loop. Inductance is a measure of how much opposition a loop offers to a change in the current in the loop. Inductance has the SI unit of **henry** (H), where $1 \text{ H} = 1 \text{ V} \cdot \text{s/A}$.

The inductance of any coil is

$$L = \frac{N\Phi_B}{i} \quad (32.2)$$

where N is the total number of turns and Φ_B is the magnetic flux through the coil. The inductance of a device depends on its geometry. For example, the inductance of an air-core solenoid is

$$L = \mu_0 \frac{N^2}{\ell} A \quad (32.4)$$

where ℓ is the length of the solenoid and A is the cross-sectional area.

If a resistor and inductor are connected in series to a battery of emf \mathcal{E} at time $t = 0$, the current in the circuit varies in time according to the expression

$$i = \frac{\mathcal{E}}{R} (1 - e^{-t/\tau}) \quad (32.7)$$

where $\tau = L/R$ is the **time constant** of the RL circuit. If we replace the battery in the circuit by a resistanceless wire, the current decays exponentially with time according to the expression

$$i = \frac{\mathcal{E}}{R} e^{-t/\tau} \quad (32.10)$$

where \mathcal{E}/R is the initial current in the circuit.

The energy stored in the magnetic field of an inductor carrying a current i is

$$U_B = \frac{1}{2} Li^2 \quad (32.12)$$

This energy is the magnetic counterpart to the energy stored in the electric field of a charged capacitor.

The energy density at a point where the magnetic field is B is

$$u_B = \frac{B^2}{2\mu_0} \quad (32.14)$$

The **mutual inductance** of a system of two coils is

$$M_{12} = \frac{N_2\Phi_{12}}{i_1} = M_{21} = \frac{N_1\Phi_{21}}{i_2} = M \quad (32.15)$$

This mutual inductance allows us to relate the induced emf in a coil to the changing source current in a nearby coil using the relationships

$$\mathcal{E}_2 = -M_{12} \frac{di_1}{dt} \quad \text{and} \quad \mathcal{E}_1 = -M_{21} \frac{di_2}{dt} \quad (32.16, 32.17)$$

In an RLC circuit with small resistance, the charge on the capacitor varies with time according to

$$q = Q_{\max} e^{-Rt/2L} \cos \omega_d t \quad (32.31)$$

where

$$\omega_d = \left[\frac{1}{LC} - \left(\frac{R}{2L} \right)^2 \right]^{1/2} \quad (32.32)$$

In an LC circuit that has zero resistance and does not radiate electromagnetically (an idealization), the values of the charge on the capacitor and the current in the circuit vary sinusoidally in time at an angular frequency given by

$$\omega = \frac{1}{\sqrt{LC}} \quad (32.22)$$

The energy in an LC circuit continuously transfers between energy stored in the capacitor and energy stored in the inductor.

Objective Questions

I. denotes answer available in *Student Solutions Manual/Study Guide*

- The centers of two circular loops are separated by a fixed distance. (i) For what relative orientation of the loops is their mutual inductance a maximum? (a) coaxial and lying in parallel planes (b) lying in the same plane (c) lying in perpendicular planes, with the center of one on the axis of the other (d) The orientation makes no difference. (ii) For what relative orientation is their mutual inductance a minimum? Choose from the same possibilities as in part (i).
- A long, fine wire is wound into a coil with inductance 5 mH. The coil is connected across the terminals of a battery, and the current is measured a few seconds after the connection is made. The wire is unwound and wound again into a different coil with $L = 10$ mH. This second coil is connected across the same battery, and the current is measured in the same way. Compared with the current in the first coil, is the current in the second coil (a) four times as large, (b) twice as large, (c) unchanged, (d) half as large, or (e) one-fourth as large?
- A solenoidal inductor for a printed circuit board is being redesigned. To save weight, the number of turns is reduced by one-half, with the geometric dimensions kept the same. By how much must the current change if the energy stored in the inductor is to remain the same? (a) It must be four times larger. (b) It must be two times larger. (c) It should be left the same. (d) It should be one-half as large. (e) No change in the current can compensate for the reduction in the number of turns.
- In Figure OQ32.4, the switch is left in position *a* for a long time interval and is then quickly thrown to position *b*.

Rank the magnitudes of the voltages across the four circuit elements a short time thereafter from the largest to the smallest.

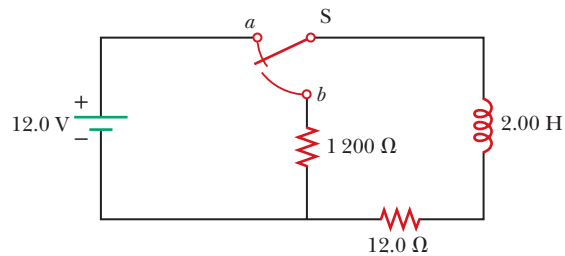


Figure OQ32.4


- Two solenoids, A and B, are wound using equal lengths of the same kind of wire. The length of the axis of each solenoid is large compared with its diameter. The axial length of A is twice as large as that of B, and A has twice as many turns as B. What is the ratio of the inductance of solenoid A to that of solenoid B? (a) 4 (b) 2 (c) 1 (d) $\frac{1}{2}$ (e) $\frac{1}{4}$
- If the current in an inductor is doubled, by what factor is the stored energy multiplied? (a) 4 (b) 2 (c) 1 (d) $\frac{1}{2}$ (e) $\frac{1}{4}$
- Initially, an inductor with no resistance carries a constant current. Then the current is brought to a new constant value twice as large. *After* this change, when the current is constant at its higher value, what has happened to the emf in the inductor? (a) It is larger than before the change by a factor of 4. (b) It is larger by a factor of 2. (c) It has the same nonzero value. (d) It continues to be zero. (e) It has decreased.

Conceptual Questions

I. denotes answer available in *Student Solutions Manual/Study Guide*

- Consider this thesis: "Joseph Henry, America's first professional physicist, caused a basic change in the human view of the Universe when he discovered self-induction during a school vacation at the Albany Academy about 1830. Before that time, one could think of the Universe as composed of only one thing: matter. The energy that temporarily maintains the current after a battery is removed from a coil, on the other hand, is not energy that belongs to any chunk of matter. It is energy in the massless magnetic field surrounding the coil. With Henry's discovery, Nature forced us to admit that the Universe consists of fields as well as matter." (a) Argue for or against the statement. (b) In your view, what makes up the Universe?
- (a) What parameters affect the inductance of a coil? (b) Does the inductance of a coil depend on the current in the coil?
- A switch controls the current in a circuit that has a large inductance. The electric arc at the switch (Fig.

CQ32.3) can melt and oxidize the contact surfaces, resulting in high resistivity of the contacts and eventual destruction of the switch. Is a spark more likely to be produced at the switch when the switch is being closed, when it is being opened, or does it not matter?



Alexandra Helder

Figure CQ32.3

- Consider the four circuits shown in Figure CQ32.4, each consisting of a battery, a switch, a lightbulb, a

resistor, and either a capacitor or an inductor. Assume the capacitor has a large capacitance and the inductor has a large inductance but no resistance. The lightbulb has high efficiency, glowing whenever it carries electric current. (i) Describe what the lightbulb does in each of circuits (a) through (d) after the switch is thrown closed. (ii) Describe what the lightbulb does in each of circuits (a) through (d) when, having been closed for a long time interval, the switch is opened.

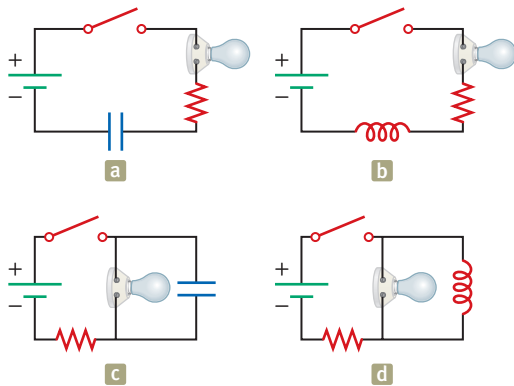


Figure CQ32.4

5. The current in a circuit containing a coil, a resistor, and a battery has reached a constant value. (a) Does the coil have an inductance? (b) Does the coil affect the value of the current?

6. (a) Can an object exert a force on itself? (b) When a coil induces an emf in itself, does it exert a force on itself?

7. The open switch in Figure CQ32.7 is thrown closed at $t = 0$. Before the switch is closed, the capacitor is uncharged and all currents are zero. Determine the currents in L , C , and R , the emf across L , and the potential differences across C and R (a) at the instant after the switch is closed and (b) long after it is closed.

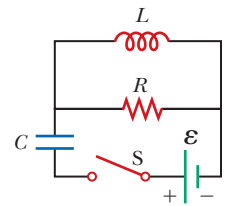


Figure CQ32.7

8. After the switch is closed in the LC circuit shown in Figure CQ32.8, the charge on the capacitor is sometimes zero, but at such instants the current in the circuit is not zero. How is this behavior possible?

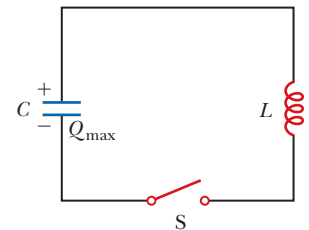


Figure CQ32.8 Conceptual Question 8 and Problems 52, 54, and 55.

9. How can you tell whether an RLC circuit is overdamped or underdamped?
10. Discuss the similarities between the energy stored in the electric field of a charged capacitor and the energy stored in the magnetic field of a current-carrying coil.

Problems

WebAssign The problems found in this chapter may be assigned online in Enhanced WebAssign

1. straightforward; 2. intermediate; 3. challenging

1. full solution available in the *Student Solutions Manual/Study Guide*

AMT Analysis Model tutorial available in Enhanced WebAssign

GP Guided Problem

M Master It tutorial available in Enhanced WebAssign

W Watch It video solution available in Enhanced WebAssign

Section 32.1 Self-Induction and Inductance

- A coil has an inductance of 3.00 mH, and the current in it changes from 0.200 A to 1.50 A in a time interval of 0.200 s. Find the magnitude of the average induced emf in the coil during this time interval.
- A coiled telephone cord forms a spiral with 70.0 turns, a diameter of 1.30 cm, and an unstretched length of 60.0 cm. Determine the inductance of one conductor in the unstretched cord.
- A 2.00-H inductor carries a steady current of 0.500 A. When the switch in the circuit is opened, the current is effectively zero after 10.0 ms. What is the average induced emf in the inductor during this time interval?
- A solenoid of radius 2.50 cm has 400 turns and a length of 20.0 cm. Find (a) its inductance and (b) the rate at

which current must change through it to produce an emf of 75.0 mV.

- An emf of 24.0 mV is induced in a 500-turn coil when the current is changing at the rate of 10.0 A/s. What is the magnetic flux through each turn of the coil at an instant when the current is 4.00 A?
- A 40.0-mA current is carried by a uniformly wound air-core solenoid with 450 turns, a 15.0-mm diameter, and 12.0-cm length. Compute (a) the magnetic field inside the solenoid, (b) the magnetic flux through each turn, and (c) the inductance of the solenoid. (d) **What If?** If the current were different, which of these quantities would change?
- The current in a coil changes from 3.50 A to 2.00 A in the same direction in 0.500 s. If the average emf induced in the coil is 12.0 mV, what is the inductance of the coil?

8. A technician wraps wire around a tube of length 36.0 cm having a diameter of 8.00 cm. When the windings are evenly spread over the full length of the tube, the result is a solenoid containing 580 turns of wire. (a) Find the inductance of this solenoid. (b) If the current in this solenoid increases at the rate of 4.00 A/s, find the self-induced emf in the solenoid.

9. The current in a 90.0-mH inductor changes with time as $i = 1.00t^2 - 6.00t$, where i is in amperes and t is in seconds. Find the magnitude of the induced emf at (a) $t = 1.00$ s and (b) $t = 4.00$ s. (c) At what time is the emf zero?

10. An inductor in the form of a solenoid contains 420 turns and is 16.0 cm in length. A uniform rate of decrease of current through the inductor of 0.421 A/s induces an emf of 175 μ V. What is the radius of the solenoid?

11. A self-induced emf in a solenoid of inductance L changes in time as $\mathcal{E} = \mathcal{E}_0 e^{-ht}$. Assuming the charge is finite, find the total charge that passes a point in the wire of the solenoid.

12. A toroid has a major radius R and a minor radius r and is tightly wound with N turns of wire on a hollow cardboard torus. Figure P32.12 shows half of this toroid, allowing us to see its cross section. If $R \gg r$, the magnetic field in the region enclosed by the wire is essentially the same as the magnetic field of a solenoid that has been bent into a large circle of radius R . Modeling the field as the uniform field of a long solenoid, show that the inductance of such a toroid is approximately

$$L \approx \frac{1}{2} \mu_0 N^2 \frac{r^2}{R}$$

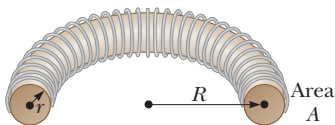


Figure P32.12

13. A 10.0-mH inductor carries a current $i = I_{\max} \sin \omega t$, with $I_{\max} = 5.00$ A and $f = \omega/2\pi = 60.0$ Hz. What is the self-induced emf as a function of time?

14. The current in a 4.00 mH-inductor varies in time as shown in Figure P32.14. Construct a graph of the self-induced emf across the inductor over the time interval $t = 0$ to $t = 12.0$ ms.

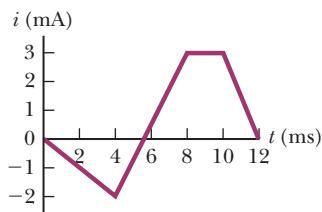


Figure P32.14

Section 32.2 RL Circuits

15. A 510-turn solenoid has a radius of 8.00 mm and an overall length of 14.0 cm. (a) What is its inductance? (b) If the solenoid is connected in series with a 2.50- Ω resistor and a battery, what is the time constant of the circuit?

16. A 12.0-V battery is connected into a series circuit containing a 10.0- Ω resistor and a 2.00-H inductor. In what time interval will the current reach (a) 50.0% and (b) 90.0% of its final value?

17. A series RL circuit with $L = 3.00$ H and a series RC circuit with $C = 3.00$ μ F have equal time constants. If the two circuits contain the same resistance R , (a) what is the value of R ? (b) What is the time constant?

18. In the circuit diagrammed in Figure P32.18, take $\mathcal{E} = 12.0$ V and $R = 24.0$ Ω . Assume the switch is open for $t < 0$ and is closed at $t = 0$. On a single set of axes, sketch graphs of the current in the circuit as a function of time for $t \geq 0$, assuming (a) the inductance in the circuit is essentially zero, (b) the inductance has an intermediate value, and (c) the inductance has a very large value. Label the initial and final values of the current.

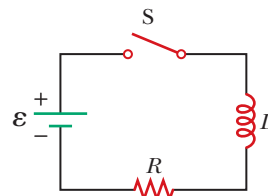


Figure P32.18

Problems 18, 20, 23, 24, and 27.

19. Consider the circuit shown in Figure P32.19. (a) When the switch is in position a , for what value of R will the circuit have a time constant of 15.0 μ s? (b) What is the current in the inductor at the instant the switch is thrown to position b ?

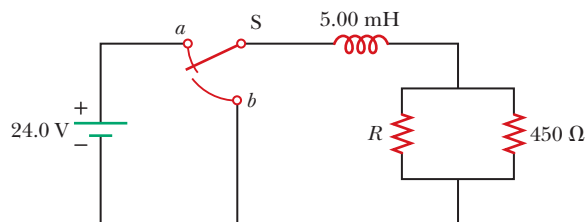


Figure P32.19

20. When the switch in Figure P32.18 is closed, the current takes 3.00 ms to reach 98.0% of its final value. If $R = 10.0$ Ω , what is the inductance?

21. A circuit consists of a coil, a switch, and a battery, all in series. The internal resistance of the battery is negligible compared with that of the coil. The switch is originally open. It is thrown closed, and after a time interval Δt , the current in the circuit reaches 80.0%

of its final value. The switch then remains closed for a time interval much longer than Δt . The wires connected to the terminals of the battery are then short-circuited with another wire and removed from the battery, so that the current is uninterrupted. (a) At an instant that is a time interval Δt after the short circuit, the current is what percentage of its maximum value? (b) At the moment $2\Delta t$ after the coil is short-circuited, the current in the coil is what percentage of its maximum value?

22. Show that $i = I_i e^{-t/\tau}$ is a solution of the differential equation

$$iR + L \frac{di}{dt} = 0$$

where I_i is the current at $t = 0$ and $\tau = L/R$.

23. In the circuit shown in Figure P32.18, let $L = 7.00$ H, $R = 9.00 \Omega$, and $\mathcal{E} = 120$ V. What is the self-induced emf 0.200 s after the switch is closed?
24. Consider the circuit in Figure P32.18, taking $\mathcal{E} = 6.00$ V, $L = 8.00$ mH, and $R = 4.00 \Omega$. (a) What is the inductive time constant of the circuit? (b) Calculate the current in the circuit 250 μ s after the switch is closed. (c) What is the value of the final steady-state current? (d) After what time interval does the current reach 80.0% of its maximum value?
25. The switch in Figure P32.25 is open for $t < 0$ and is then thrown closed at time $t = 0$. Assume $R = 4.00 \Omega$, $L = 1.00$ H, and $\mathcal{E} = 10.0$ V. Find (a) the current in the inductor and (b) the current in the switch as functions of time thereafter.

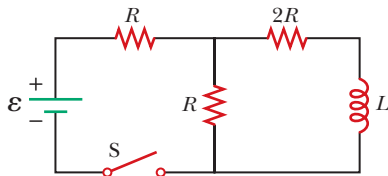


Figure P32.25 Problems 25, 26, and 64.

26. The switch in Figure P32.25 is open for $t < 0$ and is then thrown closed at time $t = 0$. Find (a) the current in the inductor and (b) the current in the switch as functions of time thereafter.
27. For the RL circuit shown in Figure P32.18, let the inductance be 3.00 H, the resistance 8.00 Ω , and the battery emf 36.0 V. (a) Calculate $\Delta V_R / \mathcal{E}_L$, that is, the ratio of the potential difference across the resistor to the emf across the inductor when the current is 2.00 A. (b) Calculate the emf across the inductor when the current is 4.50 A.

28. Consider the current pulse $i(t)$ shown in Figure P32.28a. The current begins at zero, becomes 10.0 A between $t = 0$ and $t = 200 \mu$ s, and then is zero once again. This pulse is applied to the input of the partial

circuit shown in Figure P32.28b. Determine the current in the inductor as a function of time.

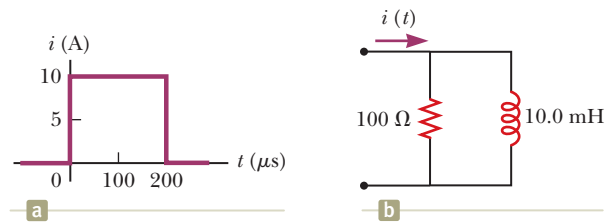


Figure P32.28

29. An inductor that has an inductance of 15.0 H and a resistance of 30.0 Ω is connected across a 100-V battery. What is the rate of increase of the current (a) at $t = 0$ and (b) at $t = 1.50$ s?
30. Two ideal inductors, L_1 and L_2 , have zero internal resistance and are far apart, so their magnetic fields do not influence each other. (a) Assuming these inductors are connected in series, show that they are equivalent to a single ideal inductor having $L_{\text{eq}} = L_1 + L_2$. (b) Assuming these same two inductors are connected in parallel, show that they are equivalent to a single ideal inductor having $1/L_{\text{eq}} = 1/L_1 + 1/L_2$. (c) **What If?** Now consider two inductors L_1 and L_2 that have nonzero internal resistances R_1 and R_2 , respectively. Assume they are still far apart, so their mutual inductance is zero, and assume they are connected in series. Show that they are equivalent to a single inductor having $L_{\text{eq}} = L_1 + L_2$ and $R_{\text{eq}} = R_1 + R_2$. (d) If these same inductors are now connected in parallel, is it necessarily true that they are equivalent to a single ideal inductor having $1/L_{\text{eq}} = 1/L_1 + 1/L_2$ and $1/R_{\text{eq}} = 1/R_1 + 1/R_2$? Explain your answer.
31. A 140-mH inductor and a 4.90- Ω resistor are connected with a switch to a 6.00-V battery as shown in Figure P32.31. (a) After the switch is first thrown to a (connecting the battery), what time interval elapses before the current reaches 220 mA? (b) What is the current in the inductor 10.0 s after the switch is closed? (c) Now the switch is quickly thrown from a to b. What time interval elapses before the current in the inductor falls to 160 mA?

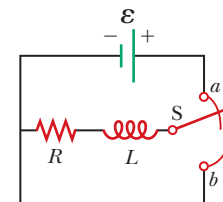


Figure P32.31

Section 32.3 Energy in a Magnetic Field

32. Calculate the energy associated with the magnetic field of a 200-turn solenoid in which a current of 1.75 A produces a magnetic flux of 3.70×10^{-4} T \cdot m² in each turn.

33. An air-core solenoid with 68 turns is 8.00 cm long and has a diameter of 1.20 cm. When the solenoid carries a current of 0.770 A, how much energy is stored in its magnetic field?

34. A 10.0-V battery, a 5.00- Ω resistor, and a 10.0-H inductor are connected in series. After the current in the circuit has reached its maximum value, calculate (a) the power being supplied by the battery, (b) the power being delivered to the resistor, (c) the power being delivered to the inductor, and (d) the energy stored in the magnetic field of the inductor.

35. On a clear day at a certain location, a 100-V/m vertical electric field exists near the Earth's surface. At the same place, the Earth's magnetic field has a magnitude of 0.500×10^{-4} T. Compute the energy densities of (a) the electric field and (b) the magnetic field.

36. Complete the calculation in Example 32.3 by proving that

$$\int_0^{\infty} e^{-2Rt/L} dt = \frac{L}{2R}$$

37. A 24.0-V battery is connected in series with a resistor and an inductor, with $R = 8.00 \Omega$ and $L = 4.00$ H, respectively. Find the energy stored in the inductor (a) when the current reaches its maximum value and (b) at an instant that is a time interval of one time constant after the switch is closed.

38. A flat coil of wire has an inductance of 40.0 mH and a resistance of 5.00 Ω . It is connected to a 22.0-V battery at the instant $t = 0$. Consider the moment when the current is 3.00 A. (a) At what rate is energy being delivered by the battery? (b) What is the power being delivered to the resistance of the coil? (c) At what rate is energy being stored in the magnetic field of the coil? (d) What is the relationship among these three power values? (e) Is the relationship described in part (d) true at other instants as well? (f) Explain the relationship at the moment immediately after $t = 0$ and at a moment several seconds later.

39. The magnetic field inside a superconducting solenoid is 4.50 T. The solenoid has an inner diameter of 6.20 cm and a length of 26.0 cm. Determine (a) the magnetic energy density in the field and (b) the energy stored in the magnetic field within the solenoid.

Section 32.4 Mutual Inductance

40. An emf of 96.0 mV is induced in the windings of a coil when the current in a nearby coil is increasing at the rate of 1.20 A/s. What is the mutual inductance of the two coils?

41. Two coils, held in fixed positions, have a mutual inductance of 100 μ H. What is the peak emf in one coil when the current in the other coil is $i(t) = 10.0 \sin(1.00 \times 10^3 t)$, where i is in amperes and t is in seconds?

42. Two coils are close to each other. The first coil carries a current given by $i(t) = 5.00 e^{-0.025 0t} \sin 120\pi t$, where i

is in amperes and t is in seconds. At $t = 0.800$ s, the emf measured across the second coil is -3.20 V. What is the mutual inductance of the coils?

43. Two solenoids A and B, spaced close to each other and sharing the same cylindrical axis, have 400 and 700 turns, respectively. A current of 3.50 A in solenoid A produces an average flux of 300 μ Wb through each turn of A and a flux of 90.0 μ Wb through each turn of B. (a) Calculate the mutual inductance of the two solenoids. (b) What is the inductance of A? (c) What emf is induced in B when the current in A changes at the rate of 0.500 A/s?

44. Solenoid S_1 has N_1 turns, radius R_1 , and length ℓ . It is so long that its magnetic field is uniform nearly everywhere inside it and is nearly zero outside. Solenoid S_2 has N_2 turns, radius $R_2 < R_1$, and the same length as S_1 . It lies inside S_1 , with their axes parallel. (a) Assume S_1 carries variable current i . Compute the mutual inductance characterizing the emf induced in S_2 . (b) Now assume S_2 carries current i . Compute the mutual inductance to which the emf in S_1 is proportional. (c) State how the results of parts (a) and (b) compare with each other.

45. On a printed circuit board, a relatively long, straight conductor and a conducting rectangular loop lie in the same plane as shown in Figure P32.45. Taking $h = 0.400$ mm, $w = 1.30$ mm, and $\ell = 2.70$ mm, find their mutual inductance.

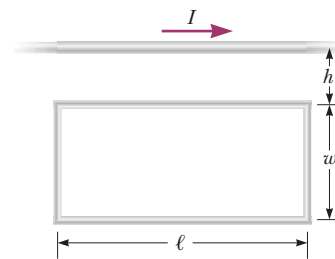


Figure P32.45

46. Two single-turn circular loops of wire have radii R and r , with $R \gg r$. The loops lie in the same plane and are concentric. (a) Show that the mutual inductance of the pair is approximately $M = \mu_0 \pi r^2 / 2R$. (b) Evaluate M for $r = 2.00$ cm and $R = 20.0$ cm.

Section 32.5 Oscillations in an LC Circuit

47. In the circuit of Figure P32.47, the battery emf is 50.0 V, the resistance is 250 Ω , and the capacitance is 0.500 μ F. The switch S is closed for a long time

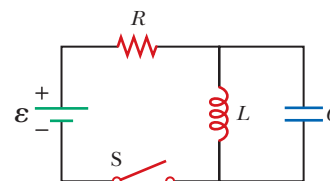


Figure P32.47

interval, and zero potential difference is measured across the capacitor. After the switch is opened, the potential difference across the capacitor reaches a maximum value of 150 V. What is the value of the inductance?

48. A $1.05\text{-}\mu\text{H}$ inductor is connected in series with a variable capacitor in the tuning section of a shortwave radio set. What capacitance tunes the circuit to the signal from a transmitter broadcasting at 6.30 MHz ?
49. A $1.00\text{-}\mu\text{F}$ capacitor is charged by a 40.0-V power supply. The fully charged capacitor is then discharged through a 10.0-mH inductor. Find the maximum current in the resulting oscillations.
50. Calculate the inductance of an LC circuit that oscillates at 120 Hz when the capacitance is $8.00\text{ }\mu\text{F}$.
51. An LC circuit consists of a 20.0-mH inductor and a $0.500\text{-}\mu\text{F}$ capacitor. If the maximum instantaneous current is 0.100 A , what is the greatest potential difference across the capacitor?
52. Why is the following situation impossible? The LC circuit shown in Figure CQ32.8 has $L = 30.0\text{ mH}$ and $C = 50.0\text{ }\mu\text{F}$. The capacitor has an initial charge of $200\text{ }\mu\text{C}$. The switch is closed, and the circuit undergoes undamped LC oscillations. At periodic instants, the energies stored by the capacitor and the inductor are equal, with each of the two components storing $250\text{ }\mu\text{J}$.
53. The switch in Figure P32.53 is connected to position a for a long time interval. At $t = 0$, the switch is thrown to position b . After this time, what are (a) the frequency of oscillation of the LC circuit, (b) the maximum charge that appears on the capacitor, (c) the maximum current in the inductor, and (d) the total energy the circuit possesses at $t = 3.00\text{ s}$?

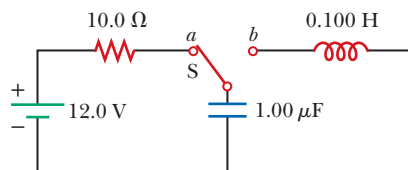


Figure P32.53

54. An LC circuit like that in Figure CQ32.8 consists of a 3.30-H inductor and an 840-pF capacitor that initially carries a $105\text{-}\mu\text{C}$ charge. The switch is open for $t < 0$ and is then thrown closed at $t = 0$. Compute the following quantities at $t = 2.00\text{ ms}$: (a) the energy stored in the capacitor, (b) the energy stored in the inductor, and (c) the total energy in the circuit.
55. An LC circuit like the one in Figure CQ32.8 contains an 82.0-mH inductor and a $17.0\text{-}\mu\text{F}$ capacitor that initially carries a $180\text{-}\mu\text{C}$ charge. The switch is open for $t < 0$ and is then thrown closed at $t = 0$. (a) Find the frequency (in hertz) of the resulting oscillations. At $t = 1.00\text{ ms}$, find (b) the charge on the capacitor and (c) the current in the circuit.

Section 32.6 The RLC Circuit

56. Show that Equation 32.28 in the text is Kirchhoff's loop rule as applied to the circuit in Figure P32.56 with the switch thrown to position b .

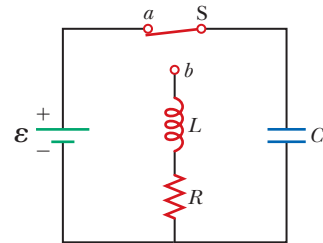


Figure P32.56 Problems 56 and 57.

57. In Figure P32.56, let $R = 7.60\text{ }\Omega$, $L = 2.20\text{ mH}$, and $C = 1.80\text{ }\mu\text{F}$. (a) Calculate the frequency of the damped oscillation of the circuit when the switch is thrown to position b . (b) What is the critical resistance for damped oscillations?
58. Consider an LC circuit in which $L = 500\text{ mH}$ and $C = 0.100\text{ }\mu\text{F}$. (a) What is the resonance frequency ω_0 ? (b) If a resistance of $1.00\text{ k}\Omega$ is introduced into this circuit, what is the frequency of the damped oscillations? (c) By what percentage does the frequency of the damped oscillations differ from the resonance frequency?
59. Electrical oscillations are initiated in a series circuit containing a capacitance C , inductance L , and resistance R . (a) If $R \ll \sqrt{4L/C}$ (weak damping), what time interval elapses before the amplitude of the current oscillation falls to 50.0% of its initial value? (b) Over what time interval does the energy decrease to 50.0% of its initial value?

Additional Problems

60. **Review.** This problem extends the reasoning of Section 26.4, Problem 38 in Chapter 26, Problem 34 in Chapter 30, and Section 32.3. (a) Consider a capacitor with vacuum between its large, closely spaced, oppositely charged parallel plates. Show that the force on one plate can be accounted for by thinking of the electric field between the plates as exerting a "negative pressure" equal to the energy density of the electric field. (b) Consider two infinite plane sheets carrying electric currents in opposite directions with equal linear current densities J_s . Calculate the force per area acting on one sheet due to the magnetic field, of magnitude $\mu_0 J_s/2$, created by the other sheet. (c) Calculate the net magnetic field between the sheets and the field outside of the volume between them. (d) Calculate the energy density in the magnetic field between the sheets. (e) Show that the force on one sheet can be accounted for by thinking of the magnetic field between the sheets as exerting a positive pressure equal to its energy density. This result for magnetic pressure applies to all current configurations, not only to sheets of current.

61. A 1.00-mH inductor and a 1.00- μF capacitor are connected in series. The current in the circuit increases linearly in time as $i = 20.0t$, where i is in amperes and t is in seconds. The capacitor initially has no charge. Determine (a) the voltage across the inductor as a function of time, (b) the voltage across the capacitor as a function of time, and (c) the time when the energy stored in the capacitor first exceeds that in the inductor.
62. An inductor having inductance L and a capacitor having capacitance C are connected in series. The current in the circuit increases linearly in time as described by $i = Kt$, where K is a constant. The capacitor is initially uncharged. Determine (a) the voltage across the inductor as a function of time, (b) the voltage across the capacitor as a function of time, and (c) the time when the energy stored in the capacitor first exceeds that in the inductor.
63. A capacitor in a series LC circuit has an initial charge Q and is being discharged. When the charge on the capacitor is $Q/2$, find the flux through each of the N turns in the coil of the inductor in terms of Q , N , L , and C .
64. In the circuit diagrammed in Figure P32.25, assume the switch has been closed for a long time interval and is opened at $t = 0$. Also assume $R = 4.00\ \Omega$, $L = 1.00\ \text{H}$, and $\mathcal{E} = 10.0\ \text{V}$. (a) Before the switch is opened, does the inductor behave as an open circuit, a short circuit, a resistor of some particular resistance, or none of those choices? (b) What current does the inductor carry? (c) How much energy is stored in the inductor for $t < 0$? (d) After the switch is opened, what happens to the energy previously stored in the inductor? (e) Sketch a graph of the current in the inductor for $t \geq 0$. Label the initial and final values and the time constant.
65. When the current in the portion of the circuit shown in Figure P32.65 is 2.00 A and increases at a rate of 0.500 A/s, the measured voltage is $\Delta V_{ab} = 9.00\ \text{V}$. When the current is 2.00 A and decreases at the rate of 0.500 A/s, the measured voltage is $\Delta V_{ab} = 5.00\ \text{V}$. Calculate the values of (a) L and (b) R .

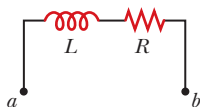


Figure P32.65

66. At the moment $t = 0$, a 24.0-V battery is connected to a 5.00-mH coil and a 6.00- Ω resistor. (a) Immediately thereafter, how does the potential difference across the resistor compare to the emf across the coil? (b) Answer the same question about the circuit several seconds later. (c) Is there an instant at which these two voltages are equal in magnitude? If so, when? Is there more than one such instant? (d) After a 4.00-A current is established in the resistor and coil, the battery is sud-

denly replaced by a short circuit. Answer parts (a), (b), and (c) again with reference to this new circuit.

67. (a) A flat, circular coil does not actually produce a uniform magnetic field in the area it encloses. Nevertheless, estimate the inductance of a flat, compact, circular coil with radius R and N turns by assuming the field at its center is uniform over its area. (b) A circuit on a laboratory table consists of a 1.50-volt battery, a 270- Ω resistor, a switch, and three 30.0-cm-long patch cords connecting them. Suppose the circuit is arranged to be circular. Think of it as a flat coil with one turn. Compute the order of magnitude of its inductance and (c) of the time constant describing how fast the current increases when you close the switch.
68. Why is the following situation impossible? You are working on an experiment involving a series circuit consisting of a charged 500- μF capacitor, a 32.0-mH inductor, and a resistor R . You discharge the capacitor through the inductor and resistor and observe the decaying oscillations of the current in the circuit. When the resistance R is 8.00 Ω , the decay in the oscillations is too slow for your experimental design. To make the decay faster, you double the resistance. As a result, you generate decaying oscillations of the current that are perfect for your needs.
69. A time-varying current i is sent through a 50.0-mH inductor from a source as shown in Figure P32.69a. The current is constant at $i = -1.00\ \text{mA}$ until $t = 0$ and then varies with time afterward as shown in Figure P32.69b. Make a graph of the emf across the inductor as a function of time.

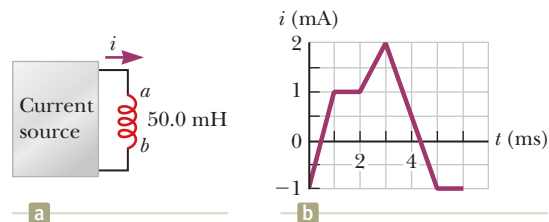


Figure P32.69

70. At $t = 0$, the open switch in Figure P32.70 is thrown closed. We wish to find a symbolic expression for the current in the inductor for time $t > 0$. Let this current be called i and choose it to be downward in the inductor in Figure P32.70. Identify i_1 as the current to the right through R_1 and i_2 as the current downward through R_2 . (a) Use Kirchhoff's junction rule to find

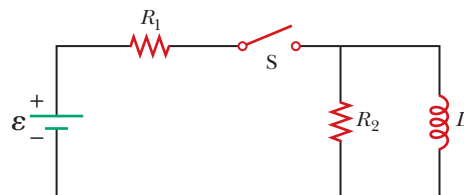


Figure P32.70

a relation among the three currents. (b) Use Kirchhoff's loop rule around the left loop to find another relationship. (c) Use Kirchhoff's loop rule around the outer loop to find a third relationship. (d) Eliminate i_1 and i_2 among the three equations to find an equation involving only the current i . (e) Compare the equation in part (d) with Equation 32.6 in the text. Use this comparison to rewrite Equation 32.7 in the text for the situation in this problem and show that

$$i(t) = \frac{\mathcal{E}}{R_1} [1 - e^{-(R'/L)t}]$$

where $R' = R_1 R_2 / (R_1 + R_2)$.

- 71.** The toroid in Figure P32.71 consists of N turns and has a rectangular cross section. Its inner and outer radii are a and b , respectively. The figure shows half of the toroid to allow us to see its cross-section. Compute the inductance of a 500-turn toroid for which $a = 10.0$ cm, $b = 12.0$ cm, and $h = 1.00$ cm.

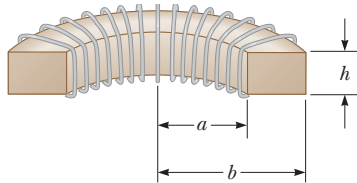


Figure P32.71 Problems 71 and 72.

- 72.** The toroid in Figure P32.71 consists of N turns and has a rectangular cross section. Its inner and outer radii are a and b , respectively. Find the inductance of the toroid.

Problems 73 through 76 apply ideas from this and earlier chapters to some properties of superconductors, which were introduced in Section 27.5.

- 73. Review.** A novel method of storing energy has been proposed. A huge underground superconducting coil, 1.00 km in diameter, would be fabricated. It would carry a maximum current of 50.0 kA through each winding of a 150-turn Nb_3Sn solenoid. (a) If the inductance of this huge coil were 50.0 H, what would be the total energy stored? (b) What would be the compressive force per unit length acting between two adjacent windings 0.250 m apart?
- 74. Review.** In an experiment carried out by S. C. Collins between 1955 and 1958, a current was maintained in a superconducting lead ring for 2.50 yr with no observed loss, even though there was no energy input. If the inductance of the ring were 3.14×10^{-8} H and the sensitivity of the experiment were 1 part in 10^9 , what was the maximum resistance of the ring? *Suggestion:* Treat the ring as an RL circuit carrying decaying current and recall that the approximation $e^{-x} \approx 1 - x$ is valid for small x .

- 75. Review.** The use of superconductors has been proposed for power transmission lines. A single coaxial cable (Fig. P32.75) could carry a power of 1.00×10^3 MW (the output of a large power plant) at 200 kV, DC, over a distance of 1.00×10^3 km without loss. An inner wire of radius $a = 2.00$ cm, made from the superconductor Nb_3Sn , carries the current I in one direction. A surrounding superconducting cylinder of radius $b = 5.00$ cm would carry the return current I . In such a system, what is the magnetic field (a) at the surface of the inner conductor and (b) at the inner surface of the outer conductor? (c) How much energy would be stored in the magnetic field in the space between the conductors in a 1.00×10^3 km superconducting line? (d) What is the pressure exerted on the outer conductor due to the current in the inner conductor?

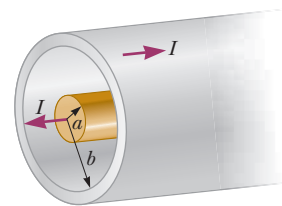


Figure P32.75

- 76. Review.** A fundamental property of a type I superconducting material is *perfect diamagnetism*, or demonstration of the *Meissner effect*, illustrated in Figure 30.27 in Section 30.6 and described as follows. If a sample of superconducting material is placed into an externally produced magnetic field or is cooled to become superconducting while it is in a magnetic field, electric currents appear on the surface of the sample. The currents have precisely the strength and orientation required to make the total magnetic field be zero throughout the interior of the sample. This problem will help you understand the magnetic force that can then act on the sample. Compare this problem with Problem 65 in Chapter 26, pertaining to the force attracting a perfect dielectric into a strong electric field.

A vertical solenoid with a length of 120 cm and a diameter of 2.50 cm consists of 1 400 turns of copper wire carrying a counterclockwise current (when viewed from above) of 2.00 A as shown in Figure P32.76a (page 996). (a) Find the magnetic field in the vacuum inside the solenoid. (b) Find the energy density of the magnetic field. Now a superconducting bar 2.20 cm in diameter is inserted partway into the solenoid. Its upper end is far outside the solenoid, where the magnetic field is negligible. The lower end of the bar is deep inside the solenoid. (c) Explain how you identify the direction required for the current on the curved surface of the bar so that the total magnetic field is zero within the bar. The field created by the supercurrents is sketched in Figure P32.76b, and the total field is sketched in Figure P32.76c. (d) The field of the solenoid exerts a force on the current in the superconductor. Explain how you determine the direction of the force on the bar. (e) Noting that the units J/m^3 of energy density are the

same as the units N/m^2 of pressure, calculate the magnitude of the force by multiplying the energy density of the solenoid field times the area of the bottom end of the superconducting bar.

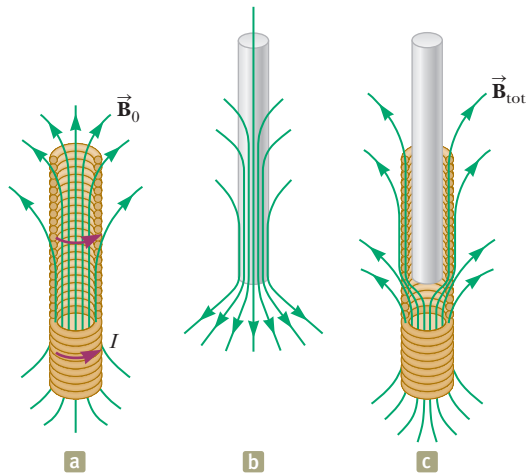


Figure P32.76

77. A wire of nonmagnetic material, with radius R , carries current uniformly distributed over its cross section. The total current carried by the wire is I . Show that the magnetic energy per unit length inside the wire is $\mu_0 I^2 / 16\pi$.

Challenge Problems

78. In earlier times when many households received non-digital television signals from an antenna, the lead-in wires from the antenna were often constructed in the form of two parallel wires (Fig. P32.78). The two wires carry currents of equal magnitude in opposite directions. The center-to-center separation of the wires is w , and a is their radius. Assume w is large enough compared with a that the wires carry the current uniformly distributed over their surfaces and negligible magnetic field exists inside the wires. (a) Why does this configuration of conductors have an inductance? (b) What constitutes the flux loop for this configuration? (c) Show that the inductance of a length x of this type of lead-in is

$$L = \frac{\mu_0 x}{\pi} \ln \left(\frac{w - a}{a} \right)$$

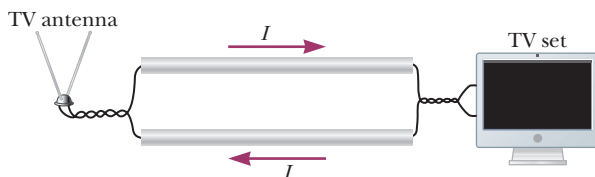


Figure P32.78

79. Assume the magnitude of the magnetic field outside a sphere of radius R is $B = B_0(R/r)^2$, where B_0 is a constant. (a) Determine the total energy stored in the

magnetic field outside the sphere. (b) Evaluate your result from part (a) for $B_0 = 5.00 \times 10^{-5} \text{ T}$ and $R = 6.00 \times 10^6 \text{ m}$, values appropriate for the Earth's magnetic field.

80. In Figure P32.80, the battery has emf $\mathcal{E} = 18.0 \text{ V}$ and the other circuit elements have values $L = 0.400 \text{ H}$, $R_1 = 2.00 \text{ k}\Omega$, and $R_2 = 6.00 \text{ k}\Omega$. The switch is closed for $t < 0$, and steady-state conditions are established. The switch is then opened at $t = 0$. (a) Find the emf across L immediately after $t = 0$. (b) Which end of the coil, a or b , is at the higher potential? (c) Make graphs of the currents in R_1 and in R_2 as a function of time, treating the steady-state directions as positive. Show values before and after $t = 0$. (d) At what moment after $t = 0$ does the current in R_2 have the value 2.00 mA ?

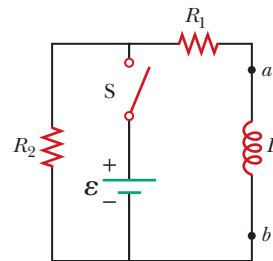


Figure P32.80

81. To prevent damage from arcing in an electric motor, a discharge resistor is sometimes placed in parallel with the armature. If the motor is suddenly unplugged while running, this resistor limits the voltage that appears across the armature coils. Consider a 12.0-V DC motor with an armature that has a resistance of 7.50Ω and an inductance of 450 mH . Assume the magnitude of the self-induced emf in the armature coils is 10.0 V when the motor is running at normal speed. (The equivalent circuit for the armature is shown in Fig. P32.81.) Calculate the maximum resistance R that limits the voltage across the armature to 80.0 V when the motor is unplugged.

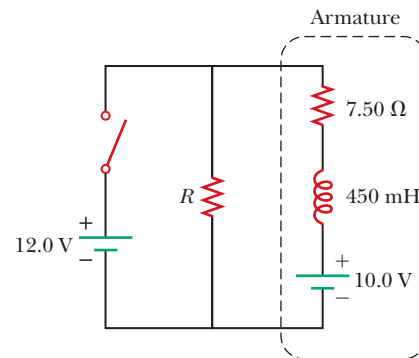


Figure P32.81

82. One application of an RL circuit is the generation of time-varying high voltage from a low-voltage source as shown in Figure P32.82. (a) What is the current in the circuit a long time after the switch has been in posi-

tion a ? (b) Now the switch is thrown quickly from a to b . Compute the initial voltage across each resistor and across the inductor. (c) How much time elapses before the voltage across the inductor drops to 12.0 V ?

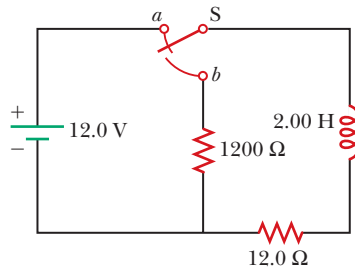


Figure P32.82

83. Two inductors having inductances L_1 and L_2 are connected in parallel as shown in Figure P32.83a. The mutual inductance between the two inductors is M . Determine the equivalent inductance L_{eq} for the system (Fig. P32.83b).

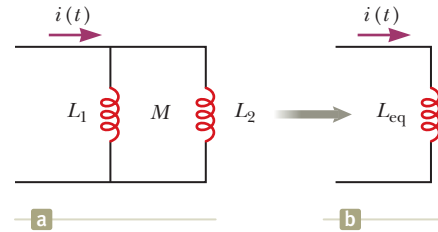


Figure P32.83

Alternating-Current Circuits

- 33.1 AC Sources
- 33.2 Resistors in an AC Circuit
- 33.3 Inductors in an AC Circuit
- 33.4 Capacitors in an AC Circuit
- 33.5 The *RLC* Series Circuit
- 33.6 Power in an AC Circuit
- 33.7 Resonance in a Series *RLC* Circuit
- 33.8 The Transformer and Power Transmission
- 33.9 Rectifiers and Filters



These large transformers are used to increase the voltage at a power plant for distribution of energy by electrical transmission to the power grid. Voltages can be changed relatively easily because power is distributed by alternating current rather than direct current. (©Lester Lefkowitz/Getty Images)

In this chapter, we describe alternating-current (AC) circuits. Every time you turn on a television set, a computer, or any of a multitude of other electrical appliances in a home, you are calling on alternating currents to provide the power to operate them. We begin our study by investigating the characteristics of simple series circuits that contain resistors, inductors, and capacitors and that are driven by a sinusoidal voltage. The primary aim of this chapter can be summarized as follows: if an AC source applies an alternating voltage to a series circuit containing resistors, inductors, and capacitors, we want to know the amplitude and time characteristics of the alternating current. We conclude this chapter with two sections concerning transformers, power transmission, and electrical filters.

33.1 AC Sources

An AC circuit consists of circuit elements and a power source that provides an alternating voltage Δv . This time-varying voltage from the source is described by

$$\Delta v = \Delta V_{\max} \sin \omega t$$

where ΔV_{\max} is the maximum output voltage of the source, or the **voltage amplitude**. There are various possibilities for AC sources, including generators as dis-

cussed in Section 31.5 and electrical oscillators. In a home, each electrical outlet serves as an AC source. Because the output voltage of an AC source varies sinusoidally with time, the voltage is positive during one half of the cycle and negative during the other half as in Figure 33.1. Likewise, the current in any circuit driven by an AC source is an alternating current that also varies sinusoidally with time.

From Equation 15.12, the angular frequency of the AC voltage is

$$\omega = 2\pi f = \frac{2\pi}{T}$$

where f is the frequency of the source and T is the period. The source determines the frequency of the current in any circuit connected to it. Commercial electric-power plants in the United States use a frequency of 60.0 Hz, which corresponds to an angular frequency of 377 rad/s.

33.2 Resistors in an AC Circuit

Consider a simple AC circuit consisting of a resistor and an AC source as shown in Figure 33.2. At any instant, the algebraic sum of the voltages around a closed loop in a circuit must be zero (Kirchhoff's loop rule). Therefore, $\Delta v + \Delta v_R = 0$ or, using Equation 27.7 for the voltage across the resistor,

$$\Delta v - i_R R = 0$$

If we rearrange this expression and substitute $\Delta V_{\max} \sin \omega t$ for Δv , the instantaneous current in the resistor is

$$i_R = \frac{\Delta v}{R} = \frac{\Delta V_{\max}}{R} \sin \omega t = I_{\max} \sin \omega t \quad (33.1)$$

where I_{\max} is the maximum current:

$$I_{\max} = \frac{\Delta V_{\max}}{R} \quad (33.2)$$

Equation 33.1 shows that the instantaneous voltage across the resistor is

$$\Delta v_R = i_R R = I_{\max} R \sin \omega t \quad (33.3)$$

A plot of voltage and current versus time for this circuit is shown in Figure 33.3a on page 1000. At point a , the current has a maximum value in one direction, arbitrarily called the positive direction. Between points a and b , the current is decreasing in magnitude but is still in the positive direction. At point b , the current is momentarily zero; it then begins to increase in the negative direction between points b and c . At point c , the current has reached its maximum value in the negative direction.

The current and voltage are in step with each other because they vary identically with time. Because i_R and Δv_R both vary as $\sin \omega t$ and reach their maximum values at the same time as shown in Figure 33.3a, they are said to be **in phase**, similar to the way two waves can be in phase as discussed in our study of wave motion in Chapter 18. Therefore, for a sinusoidal applied voltage, the current in a resistor is always in phase with the voltage across the resistor. For resistors in AC circuits, there are no new concepts to learn. Resistors behave essentially the same way in both DC and AC circuits. That, however, is not the case for capacitors and inductors.

To simplify our analysis of circuits containing two or more elements, we use a graphical representation called a *phasor diagram*. A **phasor** is a vector whose length is proportional to the maximum value of the variable it represents (ΔV_{\max} for voltage and I_{\max} for current in this discussion). The phasor rotates counterclockwise at an angular speed equal to the angular frequency associated with the variable. The

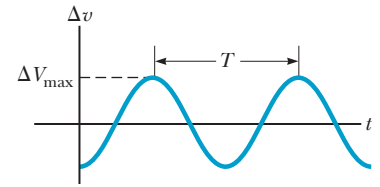


Figure 33.1 The voltage supplied by an AC source is sinusoidal with a period T .

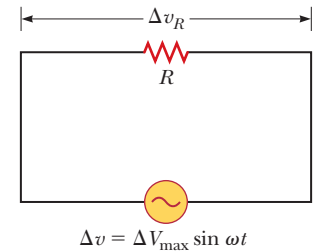


Figure 33.2 A circuit consisting of a resistor of resistance R connected to an AC source, designated by the symbol



◀ Maximum current in a resistor

◀ Voltage across a resistor

Pitfall Prevention 33.1

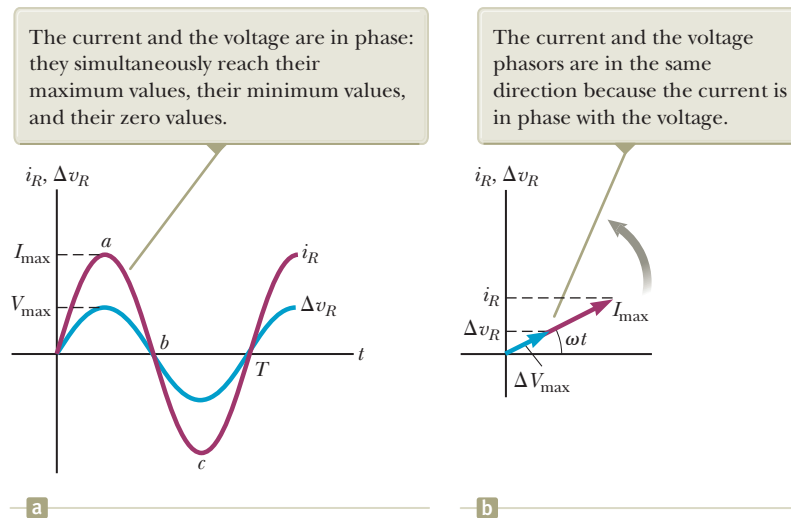
Time-Varying Values We continue to use lowercase symbols Δv and i to indicate the instantaneous values of time-varying voltages and currents. We will add a subscript to indicate the appropriate circuit element. Capital letters represent fixed values of voltage and current such as ΔV_{\max} and I_{\max} .

Figure 33.3 (a) Plots of the instantaneous current i_R and instantaneous voltage Δv_R across a resistor as functions of time. At time $t = T$, one cycle of the time-varying voltage and current has been completed. (b) Phasor diagram for the resistive circuit showing that the current is in phase with the voltage.

Pitfall Prevention 33.2

A Phasor Is Like a Graph An alternating voltage can be presented in different representations. One graphical representation is shown in Figure 33.1 in which the voltage is drawn in rectangular coordinates, with voltage on the vertical axis and time on the horizontal axis. Figure 33.3b shows another graphical representation. The phase space in which the phasor is drawn is similar to polar coordinate graph paper. The radial coordinate represents the amplitude of the voltage. The angular coordinate is the phase angle. The vertical-axis coordinate of the tip of the phasor represents the instantaneous value of the voltage. The horizontal coordinate represents nothing at all. As shown in Figure 33.3b, alternating currents can also be represented by phasors.

To help with this discussion of phasors, review Section 15.4, where we represented the simple harmonic motion of a real object by the projection of an imaginary object's uniform circular motion onto a coordinate axis. A phasor is a direct analog to this representation.



projection of the phasor onto the vertical axis represents the instantaneous value of the quantity it represents.

Figure 33.3b shows voltage and current phasors for the circuit of Figure 33.2 at some instant of time. The projections of the phasor arrows onto the vertical axis are determined by a sine function of the angle of the phasor with respect to the horizontal axis. For example, the projection of the current phasor in Figure 33.3b is $I_{\max} \sin \omega t$. Notice that this expression is the same as Equation 33.1. Therefore, the projections of phasors represent current values that vary sinusoidally in time. We can do the same with time-varying voltages. The advantage of this approach is that the phase relationships among currents and voltages can be represented as vector additions of phasors using the vector addition techniques discussed in Chapter 3.

In the case of the single-loop resistive circuit of Figure 33.2, the current and voltage phasors are in the same direction in Figure 33.3b because i_R and Δv_R are in phase. The current and voltage in circuits containing capacitors and inductors have different phase relationships.

- Quick Quiz 33.1** Consider the voltage phasor in Figure 33.4, shown at three instants of time. (i) Choose the part of the figure, (a), (b), or (c), that represents the instant of time at which the instantaneous value of the voltage has the largest magnitude. (ii) Choose the part of the figure that represents the instant of time at which the instantaneous value of the voltage has the smallest magnitude.

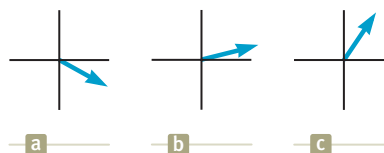


Figure 33.4 (Quick Quiz 33.1) A voltage phasor is shown at three instants of time, (a), (b), and (c).

For the simple resistive circuit in Figure 33.2, notice that the average value of the current over one cycle is zero. That is, the current is maintained in the positive direction for the same amount of time and at the same magnitude as it is maintained in the negative direction. The direction of the current, however, has no effect on the behavior of the resistor. We can understand this concept by realizing that collisions between electrons and the fixed atoms of the resistor result in an

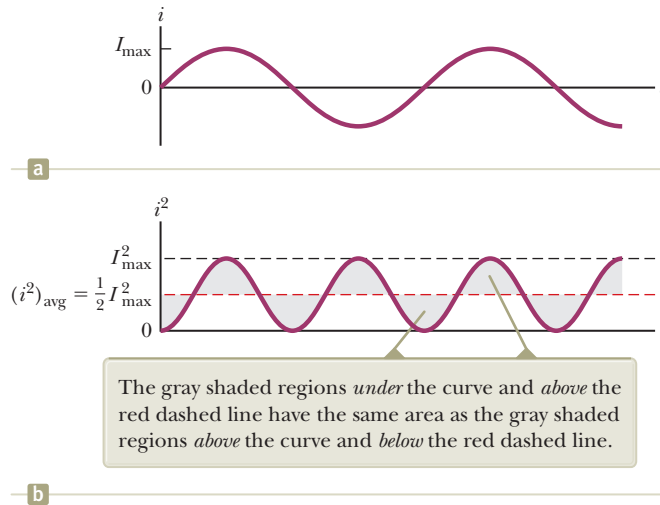


Figure 33.5 (a) Graph of the current in a resistor as a function of time. (b) Graph of the current squared in a resistor as a function of time, showing that the red dashed line is the average of $I_{\max}^2 \sin^2 \omega t$. In general, the average value of $\sin^2 \omega t$ or $\cos^2 \omega t$ over one cycle is $\frac{1}{2}$.

increase in the resistor's temperature. Although this temperature increase depends on the magnitude of the current, it is independent of the current's direction.

We can make this discussion quantitative by recalling that the rate at which energy is delivered to a resistor is the power $P = i^2 R$, where i is the instantaneous current in the resistor. Because this rate is proportional to the square of the current, it makes no difference whether the current is direct or alternating, that is, whether the sign associated with the current is positive or negative. The temperature increase produced by an alternating current having a maximum value I_{\max} , however, is not the same as that produced by a direct current equal to I_{\max} because the alternating current has this maximum value for only an instant during each cycle (Fig. 33.5a). What is of importance in an AC circuit is an average value of current, referred to as the **rms current**. As we learned in Section 21.1, the notation *rms* stands for *root-mean-square*, which in this case means the square root of the mean (average) value of the square of the current: $I_{\text{rms}} = \sqrt{(i^2)_{\text{avg}}}$. Because i^2 varies as $\sin^2 \omega t$ and because the average value of i^2 is $\frac{1}{2} I_{\max}^2$ (see Fig. 33.5b), the rms current is

$$I_{\text{rms}} = \frac{I_{\max}}{\sqrt{2}} = 0.707 I_{\max} \quad (33.4)$$

◀ rms current

This equation states that an alternating current whose maximum value is 2.00 A delivers to a resistor the same power as a direct current that has a value of $(0.707)(2.00 \text{ A}) = 1.41 \text{ A}$. The average power delivered to a resistor that carries an alternating current is

$$P_{\text{avg}} = I_{\text{rms}}^2 R$$

◀ Average power delivered to a resistor

Alternating voltage is also best discussed in terms of rms voltage, and the relationship is identical to that for current:

$$\Delta V_{\text{rms}} = \frac{\Delta V_{\max}}{\sqrt{2}} = 0.707 \Delta V_{\max} \quad (33.5)$$

◀ rms voltage

When we speak of measuring a 120-V alternating voltage from an electrical outlet, we are referring to an rms voltage of 120 V. A calculation using Equation 33.5 shows that such an alternating voltage has a maximum value of about 170 V. One reason rms values are often used when discussing alternating currents and voltages is that AC ammeters and voltmeters are designed to read rms values. Furthermore, with rms values, many of the equations we use have the same form as their direct-current counterparts.

Example 33.1 What Is the rms Current?

The voltage output of an AC source is given by the expression $\Delta v = 200 \sin \omega t$, where Δv is in volts. Find the rms current in the circuit when this source is connected to a $100\text{-}\Omega$ resistor.

SOLUTION

Conceptualize Figure 33.2 shows the physical situation for this problem.

Categorize We evaluate the current with an equation developed in this section, so we categorize this example as a substitution problem.

Combine Equations 33.2 and 33.4 to find the rms current:

$$I_{\text{rms}} = \frac{I_{\text{max}}}{\sqrt{2}} = \frac{\Delta V_{\text{max}}}{\sqrt{2}R}$$

Comparing the expression for voltage output with the general form $\Delta v = \Delta V_{\text{max}} \sin \omega t$ shows that $\Delta V_{\text{max}} = 200 \text{ V}$. Substitute numerical values:

$$I_{\text{rms}} = \frac{200 \text{ V}}{\sqrt{2} (100 \Omega)} = 1.41 \text{ A}$$

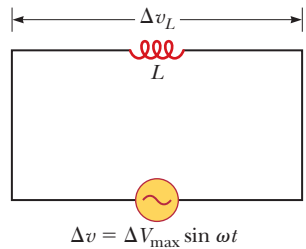


Figure 33.6 A circuit consisting of an inductor of inductance L connected to an AC source.

33.3 Inductors in an AC Circuit

Now consider an AC circuit consisting only of an inductor connected to the terminals of an AC source as shown in Figure 33.6. Because $\Delta v_L = -L(di_L/dt)$ is the self-induced instantaneous voltage across the inductor (see Eq. 32.1), Kirchhoff's loop rule applied to this circuit gives $\Delta v + \Delta v_L = 0$, or

$$\Delta v - L \frac{di_L}{dt} = 0$$

Substituting $\Delta V_{\text{max}} \sin \omega t$ for Δv and rearranging gives

$$\Delta v = L \frac{di_L}{dt} = \Delta V_{\text{max}} \sin \omega t \quad (33.6)$$

Solving this equation for di_L gives

$$di_L = \frac{\Delta V_{\text{max}}}{L} \sin \omega t dt$$

Integrating this expression¹ gives the instantaneous current i_L in the inductor as a function of time:

$$i_L = \frac{\Delta V_{\text{max}}}{L} \int \sin \omega t dt = -\frac{\Delta V_{\text{max}}}{\omega L} \cos \omega t \quad (33.7)$$

Using the trigonometric identity $\cos \omega t = -\sin(\omega t - \pi/2)$, we can express Equation 33.7 as

$$i_L = \frac{\Delta V_{\text{max}}}{\omega L} \sin \left(\omega t - \frac{\pi}{2} \right) \quad (33.8)$$

Current in an inductor ►

Comparing this result with Equation 33.6 shows that the instantaneous current i_L in the inductor and the instantaneous voltage Δv_L across the inductor are *out* of phase by $\pi/2 \text{ rad} = 90^\circ$.

A plot of voltage and current versus time is shown in Figure 33.7a. When the current i_L in the inductor is a maximum (point *b* in Fig. 33.7a), it is momentarily

¹We neglect the constant of integration here because it depends on the initial conditions, which are not important for this situation.

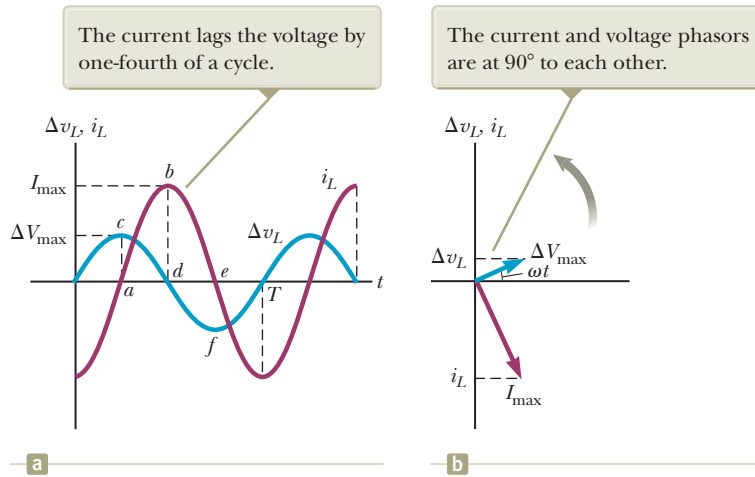


Figure 33.7 (a) Plots of the instantaneous current i_L and instantaneous voltage Δv_L across an inductor as functions of time. (b) Phasor diagram for the inductive circuit.

not changing, so the voltage across the inductor is zero (point d). At points such as a and e , the current is zero and the rate of change of current is at a maximum. Therefore, the voltage across the inductor is also at a maximum (points c and f). Notice that the voltage reaches its maximum value one-quarter of a period before the current reaches its maximum value. Therefore, for a sinusoidal applied voltage, the current in an inductor always *lags* behind the voltage across the inductor by 90° (one-quarter cycle in time).

As with the relationship between current and voltage for a resistor, we can represent this relationship for an inductor with a phasor diagram as in Figure 33.7b. The phasors are at 90° to each other, representing the 90° phase difference between current and voltage.

Equation 33.7 shows that the current in an inductive circuit reaches its maximum value when $\cos \omega t = \pm 1$:

$$I_{\max} = \frac{\Delta V_{\max}}{\omega L} \quad (33.9)$$

◀ Maximum current in an inductor

This expression is similar to the relationship between current, voltage, and resistance in a DC circuit, $I = \Delta V/R$ (Eq. 27.7). Because I_{\max} has units of amperes and ΔV_{\max} has units of volts, ωL must have units of ohms. Therefore, ωL has the same units as resistance and is related to current and voltage in the same way as resistance. It must behave in a manner similar to resistance in the sense that it represents opposition to the flow of charge. Because ωL depends on the applied frequency ω , the inductor *reacts* differently, in terms of offering opposition to current, for different frequencies. For this reason, we define ωL as the **inductive reactance** X_L :

$$X_L \equiv \omega L \quad (33.10)$$

◀ Inductive reactance

Therefore, we can write Equation 33.9 as

$$I_{\max} = \frac{\Delta V_{\max}}{X_L} \quad (33.11)$$

The expression for the rms current in an inductor is similar to Equation 33.11, with I_{\max} replaced by I_{rms} and ΔV_{\max} replaced by ΔV_{rms} .

Equation 33.10 indicates that, for a given applied voltage, the inductive reactance increases as the frequency increases. This conclusion is consistent with Faraday's law: the greater the rate of change of current in the inductor, the larger the back emf. The larger back emf translates to an increase in the reactance and a decrease in the current.

Using Equations 33.6 and 33.11, we find that the instantaneous voltage across the inductor is

Voltage across an inductor ▶
$$\Delta v_L = -L \frac{di_L}{dt} = -\Delta V_{\max} \sin \omega t = -I_{\max} X_L \sin \omega t \quad (33.12)$$

- Quick Quiz 33.2** Consider the AC circuit in Figure 33.8. The frequency of the AC source is adjusted while its voltage amplitude is held constant. When does the lightbulb glow the brightest? (a) It glows brightest at high frequencies. (b) It glows brightest at low frequencies. (c) The brightness is the same at all frequencies.

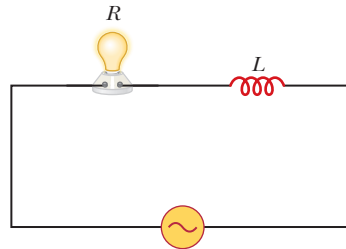


Figure 33.8 (Quick Quiz 33.2) At what frequencies does the lightbulb glow the brightest?

Example 33.2 A Purely Inductive AC Circuit

In a purely inductive AC circuit, $L = 25.0$ mH and the rms voltage is 150 V. Calculate the inductive reactance and rms current in the circuit if the frequency is 60.0 Hz.

SOLUTION

Conceptualize Figure 33.6 shows the physical situation for this problem. Keep in mind that inductive reactance increases with increasing frequency of the applied voltage.

Categorize We determine the reactance and the current from equations developed in this section, so we categorize this example as a substitution problem.

Use Equation 33.10 to find the inductive reactance:

$$X_L = \omega L = 2\pi fL = 2\pi(60.0 \text{ Hz})(25.0 \times 10^{-3} \text{ H}) \\ = 9.42 \Omega$$

Use an rms version of Equation 33.11 to find the rms current:

$$I_{\text{rms}} = \frac{\Delta V_{\text{rms}}}{X_L} = \frac{150 \text{ V}}{9.42 \Omega} = 15.9 \text{ A}$$

WHAT IF? If the frequency increases to 6.00 kHz, what happens to the rms current in the circuit?

Answer If the frequency increases, the inductive reactance also increases because the current is changing at a higher rate. The increase in inductive reactance results in a lower current.

Let's calculate the new inductive reactance and the new rms current:

$$X_L = 2\pi(6.00 \times 10^3 \text{ Hz})(25.0 \times 10^{-3} \text{ H}) = 942 \Omega$$

$$I_{\text{rms}} = \frac{150 \text{ V}}{942 \Omega} = 0.159 \text{ A}$$

33.4 Capacitors in an AC Circuit

Figure 33.9 shows an AC circuit consisting of a capacitor connected across the terminals of an AC source. Kirchhoff's loop rule applied to this circuit gives $\Delta v + \Delta v_C = 0$, or

$$\Delta v - \frac{q}{C} = 0 \quad (33.13)$$

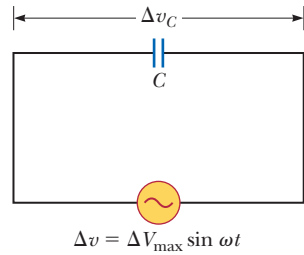


Figure 33.9 A circuit consisting of a capacitor of capacitance C connected to an AC source.

Substituting $\Delta V_{\max} \sin \omega t$ for Δv and rearranging gives

$$q = C \Delta V_{\max} \sin \omega t \quad (33.14)$$

where q is the instantaneous charge on the capacitor. Differentiating Equation 33.14 with respect to time gives the instantaneous current in the circuit:

$$i_C = \frac{dq}{dt} = \omega C \Delta V_{\max} \cos \omega t \quad (33.15)$$

Using the trigonometric identity

$$\cos \omega t = \sin \left(\omega t + \frac{\pi}{2} \right)$$

we can express Equation 33.15 in the alternative form

$$i_C = \omega C \Delta V_{\max} \sin \left(\omega t + \frac{\pi}{2} \right) \quad (33.16)$$

◀ Current in a capacitor

Comparing this expression with $\Delta v = \Delta V_{\max} \sin \omega t$ shows that the current is $\pi/2$ rad = 90° out of phase with the voltage across the capacitor. A plot of current and voltage versus time (Fig. 33.10a) shows that the current reaches its maximum value one-quarter of a cycle sooner than the voltage reaches its maximum value.

Consider a point such as b in Figure 33.10a where the current is zero at this instant. That occurs when the capacitor reaches its maximum charge so that the voltage across the capacitor is a maximum (point d). At points such as a and e , the current is a maximum, which occurs at those instants when the charge on the capacitor reaches zero and the capacitor begins to recharge with the opposite polarity. When the charge is zero, the voltage across the capacitor is zero (points c and f).

As with inductors, we can represent the current and voltage for a capacitor on a phasor diagram. The phasor diagram in Figure 33.10b shows that for a sinusoidally applied voltage, the current always *leads* the voltage across a capacitor by 90° .

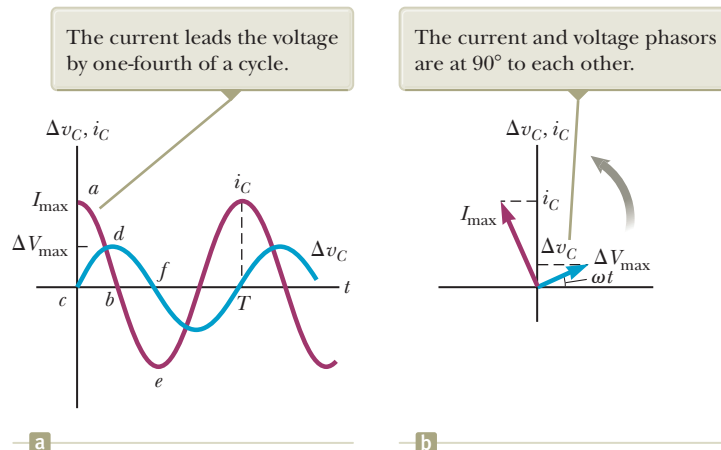


Figure 33.10 (a) Plots of the instantaneous current i_C and instantaneous voltage Δv_C across a capacitor as functions of time. (b) Phasor diagram for the capacitive circuit.

Equation 33.15 shows that the current in the circuit reaches its maximum value when $\cos \omega t = \pm 1$:

$$I_{\max} = \omega C \Delta V_{\max} = \frac{\Delta V_{\max}}{(1/\omega C)} \quad (33.17)$$

As in the case with inductors, this looks like Equation 27.7, so the denominator plays the role of resistance, with units of ohms. We give the combination $1/\omega C$ the symbol X_C , and because this function varies with frequency, we define it as the **capacitive reactance**:

Capacitive reactance ►

$$X_C \equiv \frac{1}{\omega C} \quad (33.18)$$

We can now write Equation 33.17 as

Maximum current ►
in a capacitor

$$I_{\max} = \frac{\Delta V_{\max}}{X_C} \quad (33.19)$$

The rms current is given by an expression similar to Equation 33.19, with I_{\max} replaced by I_{rms} and ΔV_{\max} replaced by ΔV_{rms} .

Using Equation 33.19, we can express the instantaneous voltage across the capacitor as

Voltage across a capacitor ►

$$\Delta v_C = \Delta V_{\max} \sin \omega t = I_{\max} X_C \sin \omega t \quad (33.20)$$

Equations 33.18 and 33.19 indicate that as the frequency of the voltage source increases, the capacitive reactance decreases and the maximum current therefore increases. The frequency of the current is determined by the frequency of the voltage source driving the circuit. As the frequency approaches zero, the capacitive reactance approaches infinity and the current therefore approaches zero. This conclusion makes sense because the circuit approaches direct current conditions as ω approaches zero and the capacitor represents an open circuit.

Quick Quiz 33.3 Consider the AC circuit in Figure 33.11. The frequency of the AC source is adjusted while its voltage amplitude is held constant. When does the lightbulb glow the brightest? (a) It glows brightest at high frequencies. (b) It glows brightest at low frequencies. (c) The brightness is the same at all frequencies.

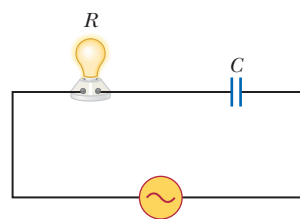


Figure 33.11 (Quick Quiz 33.3)

Quick Quiz 33.4 Consider the AC circuit in Figure 33.12. The frequency of the AC source is adjusted while its voltage amplitude is held constant. When does the lightbulb glow the brightest? (a) It glows brightest at high frequencies. (b) It glows brightest at low frequencies. (c) The brightness is the same at all frequencies.

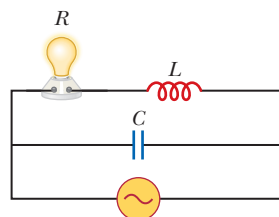


Figure 33.12 (Quick Quiz 33.4)

Example 33.3 A Purely Capacitive AC Circuit

An $8.00\text{-}\mu\text{F}$ capacitor is connected to the terminals of a 60.0-Hz AC source whose rms voltage is 150 V . Find the capacitive reactance and the rms current in the circuit.

SOLUTION

Conceptualize Figure 33.9 shows the physical situation for this problem. Keep in mind that capacitive reactance decreases with increasing frequency of the applied voltage.

Categorize We determine the reactance and the current from equations developed in this section, so we categorize this example as a substitution problem.

Use Equation 33.18 to find the capacitive reactance:
$$X_C = \frac{1}{\omega C} = \frac{1}{2\pi f C} = \frac{1}{2\pi(60.0\text{ Hz})(8.00 \times 10^{-6}\text{ F})} = 332\ \Omega$$

Use an rms version of Equation 33.19 to find the rms current:
$$I_{\text{rms}} = \frac{\Delta V_{\text{rms}}}{X_C} = \frac{150\text{ V}}{332\ \Omega} = 0.452\text{ A}$$

WHAT IF? What if the frequency is doubled? What happens to the rms current in the circuit?

Answer If the frequency increases, the capacitive reactance decreases, which is just the opposite from the case of an inductor. The decrease in capacitive reactance results in an increase in the current.

Let's calculate the new capacitive reactance and the new rms current:

$$X_C = \frac{1}{\omega C} = \frac{1}{2\pi(120\text{ Hz})(8.00 \times 10^{-6}\text{ F})} = 166\ \Omega$$

$$I_{\text{rms}} = \frac{150\text{ V}}{166\ \Omega} = 0.904\text{ A}$$

33.5 The RLC Series Circuit

In the previous sections, we considered individual circuit elements connected to an AC source. Figure 33.13a shows a circuit that contains a combination of circuit elements: a resistor, an inductor, and a capacitor connected in series across an alternating-voltage source. If the applied voltage varies sinusoidally with time, the instantaneous applied voltage is

$$\Delta v = \Delta V_{\text{max}} \sin \omega t$$

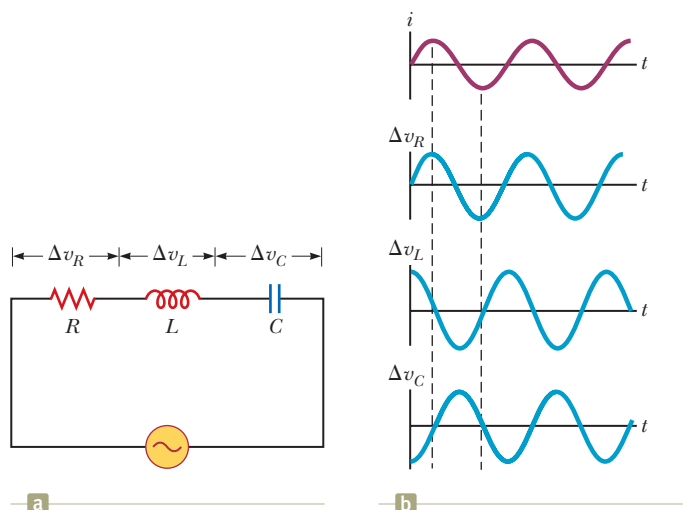


Figure 33.13 (a) A series circuit consisting of a resistor, an inductor, and a capacitor connected to an AC source. (b) Phase relationships between the current and the voltages in the individual circuit elements if they were connected alone to the AC source.

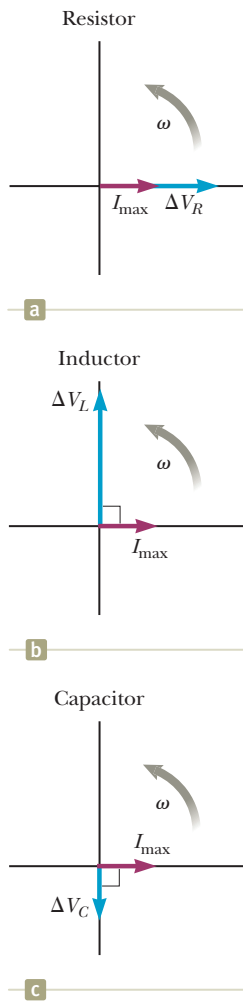


Figure 33.14 Phase relationships between the voltage and current phasors for (a) a resistor, (b) an inductor, and (c) a capacitor connected in series.

Figure 33.13b shows the voltage versus time across each element in the circuit and its phase relationships to the current if it were connected individually to the AC source, as discussed in Sections 33.2–33.4.

When the circuit elements are all connected together to the AC source, as in Figure 33.13a, the current in the circuit is given by

$$i = I_{\max} \sin(\omega t - \phi)$$

where ϕ is some **phase angle** between the current and the applied voltage. Based on our discussions of phase in Sections 33.3 and 33.4, we expect that the current will generally not be in phase with the voltage in an *RLC* circuit.

Because the circuit elements in Figure 33.13a are in series, the current everywhere in the circuit must be the same at any instant. That is, the current at all points in a series AC circuit has the same amplitude and phase. Based on the preceding sections, we know that the voltage across each element has a different amplitude and phase. In particular, the voltage across the resistor is in phase with the current, the voltage across the inductor leads the current by 90° , and the voltage across the capacitor lags behind the current by 90° . Using these phase relationships, we can express the instantaneous voltages across the three circuit elements as

$$\Delta v_R = I_{\max} R \sin \omega t = \Delta V_R \sin \omega t \quad (33.21)$$

$$\Delta v_L = I_{\max} X_L \sin\left(\omega t + \frac{\pi}{2}\right) = \Delta V_L \cos \omega t \quad (33.22)$$

$$\Delta v_C = I_{\max} X_C \sin\left(\omega t - \frac{\pi}{2}\right) = -\Delta V_C \cos \omega t \quad (33.23)$$

The sum of these three voltages must equal the instantaneous voltage from the AC source, but it is important to recognize that because the three voltages have different phase relationships with the current, they cannot be added directly. Figure 33.14 represents the phasors at an instant at which the current in all three elements is momentarily zero. The zero current is represented by the current phasor along the horizontal axis in each part of the figure. Next the voltage phasor is drawn at the appropriate phase angle to the current for each element.

Because phasors are rotating vectors, the voltage phasors in Figure 33.14 can be combined using vector addition as in Figure 33.15. In Figure 33.15a, the voltage phasors in Figure 33.14 are combined on the same coordinate axes. Figure 33.15b shows the vector addition of the voltage phasors. The voltage phasors ΔV_L and ΔV_C are in *opposite* directions along the same line, so we can construct the difference phasor $\Delta V_L - \Delta V_C$, which is perpendicular to the phasor ΔV_R . This diagram shows that the vector sum of the voltage amplitudes ΔV_R , ΔV_L , and ΔV_C equals a phasor whose length is the maximum applied voltage ΔV_{\max} and which makes an angle ϕ with the current phasor I_{\max} . From the right triangle in Figure 33.15b, we see that

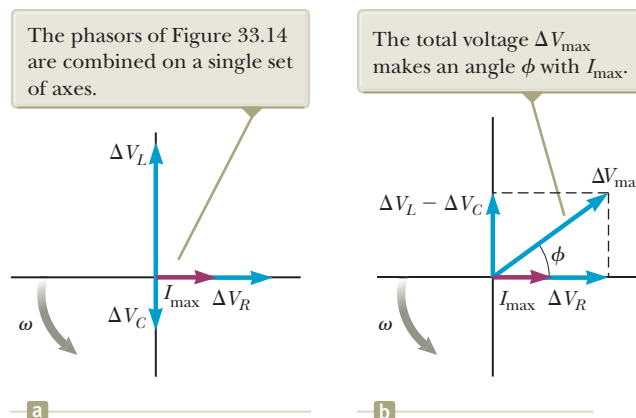


Figure 33.15 (a) Phasor diagram for the series *RLC* circuit shown in Figure 33.13a. (b) The inductance and capacitance phasors are added together and then added vectorially to the resistance phasor.

$$\Delta V_{\max} = \sqrt{\Delta V_R^2 + (\Delta V_L - \Delta V_C)^2} = \sqrt{(I_{\max}R)^2 + (I_{\max}X_L - I_{\max}X_C)^2}$$

$$\Delta V_{\max} = I_{\max} \sqrt{R^2 + (X_L - X_C)^2}$$

Therefore, we can express the maximum current as

$$I_{\max} = \frac{\Delta V_{\max}}{\sqrt{R^2 + (X_L - X_C)^2}} \quad (33.24) \quad \leftarrow \text{Maximum current in an RLC circuit}$$

Once again, this expression has the same mathematical form as Equation 27.7. The denominator of the fraction plays the role of resistance and is called the **impedance** Z of the circuit:

$$Z \equiv \sqrt{R^2 + (X_L - X_C)^2} \quad (33.25) \quad \leftarrow \text{Impedance}$$

where impedance also has units of ohms. Therefore, Equation 33.24 can be written in the form

$$I_{\max} = \frac{\Delta V_{\max}}{Z} \quad (33.26)$$

Equation 33.26 is the AC equivalent of Equation 27.7. Note that the impedance and therefore the current in an AC circuit depend on the resistance, the inductance, the capacitance, and the frequency (because the reactances are frequency dependent).

From the right triangle in the phasor diagram in Figure 33.15b, the phase angle ϕ between the current and the voltage is found as follows:

$$\phi = \tan^{-1} \left(\frac{\Delta V_L - \Delta V_C}{\Delta V_R} \right) = \tan^{-1} \left(\frac{I_{\max}X_L - I_{\max}X_C}{I_{\max}R} \right)$$

$$\phi = \tan^{-1} \left(\frac{X_L - X_C}{R} \right) \quad (33.27) \quad \leftarrow \text{Phase angle}$$

When $X_L > X_C$ (which occurs at high frequencies), the phase angle is positive, signifying that the current lags the applied voltage as in Figure 33.15b. We describe this situation by saying that the circuit is *more inductive than capacitive*. When $X_L < X_C$, the phase angle is negative, signifying that the current leads the applied voltage, and the circuit is *more capacitive than inductive*. When $X_L = X_C$, the phase angle is zero and the circuit is *purely resistive*.

Quick Quiz 33.5 Label each part of Figure 33.16, (a), (b), and (c), as representing $X_L > X_C$, $X_L = X_C$, or $X_L < X_C$.

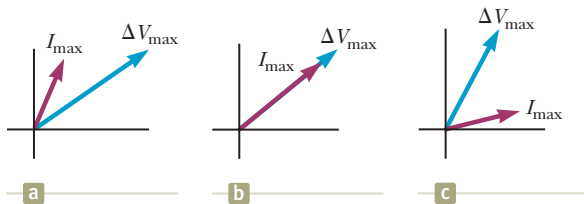


Figure 33.16 (Quick Quiz 33.5) Match the phasor diagrams to the relationships between the reactances.

Example 33.4 Analyzing a Series RLC Circuit

A series RLC circuit has $R = 425 \, \Omega$, $L = 1.25 \, \text{H}$, and $C = 3.50 \, \mu\text{F}$. It is connected to an AC source with $f = 60.0 \, \text{Hz}$ and $\Delta V_{\max} = 150 \, \text{V}$.

(A) Determine the inductive reactance, the capacitive reactance, and the impedance of the circuit.

continued

▶ 33.4 continued

SOLUTION

Conceptualize The circuit of interest in this example is shown in Figure 33.13a. The current in the combination of the resistor, inductor, and capacitor oscillates at a particular phase angle with respect to the applied voltage.

Categorize The circuit is a simple series RLC circuit, so we can use the approach discussed in this section.

Analyze Find the angular frequency:

$$\omega = 2\pi f = 2\pi(60.0 \text{ Hz}) = 377 \text{ s}^{-1}$$

Use Equation 33.10 to find the inductive reactance:

$$X_L = \omega L = (377 \text{ s}^{-1})(1.25 \text{ H}) = 471 \Omega$$

Use Equation 33.18 to find the capacitive reactance:

$$X_C = \frac{1}{\omega C} = \frac{1}{(377 \text{ s}^{-1})(3.50 \times 10^{-6} \text{ F})} = 758 \Omega$$

Use Equation 33.25 to find the impedance:

$$\begin{aligned} Z &= \sqrt{R^2 + (X_L - X_C)^2} \\ &= \sqrt{(425 \Omega)^2 + (471 \Omega - 758 \Omega)^2} = 513 \Omega \end{aligned}$$

(B) Find the maximum current in the circuit.

SOLUTION

Use Equation 33.26 to find the maximum current:

$$I_{\max} = \frac{\Delta V_{\max}}{Z} = \frac{150 \text{ V}}{513 \Omega} = 0.293 \text{ A}$$

(C) Find the phase angle between the current and voltage.

SOLUTION

Use Equation 33.27 to calculate the phase angle:

$$\phi = \tan^{-1} \left(\frac{X_L - X_C}{R} \right) = \tan^{-1} \left(\frac{471 \Omega - 758 \Omega}{425 \Omega} \right) = -34.0^\circ$$

(D) Find the maximum voltage across each element.

SOLUTION

Use Equations 33.2, 33.11, and 33.19 to calculate the maximum voltages:

$$\Delta V_R = I_{\max} R = (0.293 \text{ A})(425 \Omega) = 124 \text{ V}$$

$$\Delta V_L = I_{\max} X_L = (0.293 \text{ A})(471 \Omega) = 138 \text{ V}$$

$$\Delta V_C = I_{\max} X_C = (0.293 \text{ A})(758 \Omega) = 222 \text{ V}$$

(E) What replacement value of L should an engineer analyzing the circuit choose such that the current leads the applied voltage by 30.0° rather than 34.0° ? All other values in the circuit stay the same.

SOLUTION

Solve Equation 33.27 for the inductive reactance:

$$X_L = X_C + R \tan \phi$$

Substitute Equations 33.10 and 33.18 into this expression:

$$\omega L = \frac{1}{\omega C} + R \tan \phi$$

Solve for L :

$$L = \frac{1}{\omega} \left(\frac{1}{\omega C} + R \tan \phi \right)$$

Substitute the given values:

$$L = \frac{1}{(377 \text{ s}^{-1})} \left[\frac{1}{(377 \text{ s}^{-1})(3.50 \times 10^{-6} \text{ F})} + (425 \Omega) \tan(-30.0^\circ) \right]$$

$$L = 1.36 \text{ H}$$

Finalize Because the capacitive reactance is larger than the inductive reactance, the circuit is more capacitive than inductive. In this case, the phase angle ϕ is negative, so the current leads the applied voltage.

▶ 33.4 continued

Using Equations 33.21, 33.22, and 33.23, the instantaneous voltages across the three elements are

$$\Delta v_R = (124 \text{ V}) \sin 377t$$

$$\Delta v_L = (138 \text{ V}) \cos 377t$$

$$\Delta v_C = (-222 \text{ V}) \cos 377t$$

WHAT IF? What if you added up the maximum voltages across the three circuit elements? Is that a physically meaningful quantity?

Answer The sum of the maximum voltages across the elements is $\Delta V_R + \Delta V_L + \Delta V_C = 484 \text{ V}$. This sum is much greater than the maximum voltage of the source, 150 V. The sum of the maximum voltages is a meaningless quantity because when sinusoidally varying quantities are added, *both their amplitudes and their phases* must be taken into account. The maximum voltages across the various elements occur at different times. Therefore, the voltages must be added in a way that takes account of the different phases as shown in Figure 33.15.

33.6 Power in an AC Circuit

Now let's take an energy approach to analyzing AC circuits and consider the transfer of energy from the AC source to the circuit. The power delivered by a battery to an external DC circuit is equal to the product of the current and the terminal voltage of the battery. Likewise, the instantaneous power delivered by an AC source to a circuit is the product of the current and the applied voltage. For the *RLC* circuit shown in Figure 33.13a, we can express the instantaneous power P as

$$\begin{aligned} P &= i \Delta v = I_{\max} \sin(\omega t - \phi) \Delta V_{\max} \sin \omega t \\ P &= I_{\max} \Delta V_{\max} \sin \omega t \sin(\omega t - \phi) \end{aligned} \quad (33.28)$$

This result is a complicated function of time and is therefore not very useful from a practical viewpoint. What is generally of interest is the average power over one or more cycles. Such an average can be computed by first using the trigonometric identity $\sin(\omega t - \phi) = \sin \omega t \cos \phi - \cos \omega t \sin \phi$. Substituting this identity into Equation 33.28 gives

$$P = I_{\max} \Delta V_{\max} \sin^2 \omega t \cos \phi - I_{\max} \Delta V_{\max} \sin \omega t \cos \omega t \sin \phi \quad (33.29)$$

Let's now take the time average of P over one or more cycles, noting that I_{\max} , ΔV_{\max} , ϕ , and ω are all constants. The time average of the first term on the right of the equal sign in Equation 33.29 involves the average value of $\sin^2 \omega t$, which is $\frac{1}{2}$. The time average of the second term on the right of the equal sign is identically zero because $\sin \omega t \cos \omega t = \frac{1}{2} \sin 2\omega t$, and the average value of $\sin 2\omega t$ is zero. Therefore, we can express the **average power** P_{avg} as

$$P_{\text{avg}} = \frac{1}{2} I_{\max} \Delta V_{\max} \cos \phi \quad (33.30)$$

It is convenient to express the average power in terms of the rms current and rms voltage defined by Equations 33.4 and 33.5:

$$P_{\text{avg}} = I_{\text{rms}} \Delta V_{\text{rms}} \cos \phi \quad (33.31)$$

◀ Average power delivered to an *RLC* circuit

where the quantity $\cos \phi$ is called the **power factor**. Figure 33.15b shows that the maximum voltage across the resistor is given by $\Delta V_R = \Delta V_{\max} \cos \phi = I_{\max} R$. Therefore, $\cos \phi = I_{\max} R / \Delta V_{\max} = R/Z$, and we can express P_{avg} as

$$P_{\text{avg}} = I_{\text{rms}} \Delta V_{\text{rms}} \cos \phi = I_{\text{rms}} \Delta V_{\text{rms}} \left(\frac{R}{Z} \right) = I_{\text{rms}} \left(\frac{\Delta V_{\text{rms}}}{Z} \right) R$$

Recognizing that $\Delta V_{\text{rms}}/Z = I_{\text{rms}}$ gives

$$P_{\text{avg}} = I_{\text{rms}}^2 R \quad (33.32)$$

The average power delivered by the source is converted to internal energy in the resistor, just as in the case of a DC circuit. When the load is purely resistive, $\phi = 0$, $\cos \phi = 1$, and, from Equation 33.31, we see that

$$P_{\text{avg}} = I_{\text{rms}} \Delta V_{\text{rms}}$$

Note that no power losses are associated with pure capacitors and pure inductors in an AC circuit. To see why that is true, let's first analyze the power in an AC circuit containing only a source and a capacitor. When the current begins to increase in one direction in an AC circuit, charge begins to accumulate on the capacitor and a voltage appears across it. When this voltage reaches its maximum value, the energy stored in the capacitor as electric potential energy is $\frac{1}{2}C(\Delta V_{\text{max}})^2$. This energy storage, however, is only momentary. The capacitor is charged and discharged twice during each cycle: charge is delivered to the capacitor during two quarters of the cycle and is returned to the voltage source during the remaining two quarters. Therefore, the average power supplied by the source is zero. In other words, no power losses occur in a capacitor in an AC circuit.

Now consider the case of an inductor. When the current in an inductor reaches its maximum value, the energy stored in the inductor is a maximum and is given by $\frac{1}{2}LI_{\text{max}}^2$. When the current begins to decrease in the circuit, this stored energy in the inductor returns to the source as the inductor attempts to maintain the current in the circuit.

Equation 33.31 shows that the power delivered by an AC source to any circuit depends on the phase, a result that has many interesting applications. For example, a factory that uses large motors in machines, generators, or transformers has a large inductive load (because of all the windings). To deliver greater power to such devices in the factory without using excessively high voltages, technicians introduce capacitance in the circuits to shift the phase.

- Quick Quiz 33.6** An AC source drives an *RLC* circuit with a fixed voltage amplitude. If the driving frequency is ω_1 , the circuit is more capacitive than inductive and the phase angle is -10° . If the driving frequency is ω_2 , the circuit is more inductive than capacitive and the phase angle is $+10^\circ$. At what frequency is the largest amount of power delivered to the circuit? **(a)** It is largest at ω_1 . **(b)** It is largest at ω_2 . **(c)** The same amount of power is delivered at both frequencies.

Example 33.5 Average Power in an *RLC* Series Circuit

Calculate the average power delivered to the series *RLC* circuit described in Example 33.4.

SOLUTION

Conceptualize Consider the circuit in Figure 33.13a and imagine energy being delivered to the circuit by the AC source. Review Example 33.4 for other details about this circuit.

Categorize We find the result by using equations developed in this section, so we categorize this example as a substitution problem.

Use Equation 33.5 and the maximum voltage from Example 33.4 to find the rms voltage from the source:

$$\Delta V_{\text{rms}} = \frac{\Delta V_{\text{max}}}{\sqrt{2}} = \frac{150 \text{ V}}{\sqrt{2}} = 106 \text{ V}$$

Similarly, find the rms current in the circuit:

$$I_{\text{rms}} = \frac{I_{\text{max}}}{\sqrt{2}} = \frac{0.293 \text{ A}}{\sqrt{2}} = 0.207 \text{ A}$$

33.5 continued

Use Equation 33.31 to find the power delivered by the source:

$$P_{\text{avg}} = I_{\text{rms}} V_{\text{rms}} \cos \phi = (0.207 \text{ A})(106 \text{ V}) \cos (-34.0^\circ) \\ = 18.2 \text{ W}$$

33.7 Resonance in a Series *RLC* Circuit

We investigated resonance in mechanical oscillating systems in Chapter 15. As shown in Chapter 32, a series *RLC* circuit is an electrical oscillating system. Such a circuit is said to be **in resonance** when the driving frequency is such that the rms current has its maximum value. In general, the rms current can be written

$$I_{\text{rms}} = \frac{\Delta V_{\text{rms}}}{Z} \quad (33.33)$$

where Z is the impedance. Substituting the expression for Z from Equation 33.25 into Equation 33.33 gives

$$I_{\text{rms}} = \frac{\Delta V_{\text{rms}}}{\sqrt{R^2 + (X_L - X_C)^2}} \quad (33.34)$$

Because the impedance depends on the frequency of the source, the current in the *RLC* circuit also depends on the frequency. The angular frequency ω_0 at which $X_L - X_C = 0$ is called the **resonance frequency** of the circuit. To find ω_0 , we set $X_L = X_C$, which gives $\omega_0 L = 1/\omega_0 C$, or

$$\omega_0 = \frac{1}{\sqrt{LC}} \quad (33.35)$$

◀ Resonance frequency

This frequency also corresponds to the natural frequency of oscillation of an *LC* circuit (see Section 32.5). Therefore, the rms current in a series *RLC* circuit has its maximum value when the frequency of the applied voltage matches the natural oscillator frequency, which depends only on L and C . Furthermore, at the resonance frequency, the current is in phase with the applied voltage.

Quick Quiz 33.7 What is the impedance of a series *RLC* circuit at resonance?

- (a) larger than R (b) less than R (c) equal to R (d) impossible to determine

A plot of rms current versus angular frequency for a series *RLC* circuit is shown in Figure 33.17a on page 1014. The data assume a constant $\Delta V_{\text{rms}} = 5.0 \text{ mV}$, $L = 5.0 \mu\text{H}$, and $C = 2.0 \text{ nF}$. The three curves correspond to three values of R . In each case, the rms current has its maximum value at the resonance frequency ω_0 . Furthermore, the curves become narrower and taller as the resistance decreases.

Equation 33.34 shows that when $R = 0$, the current becomes infinite at resonance. Real circuits, however, always have some resistance, which limits the value of the current to some finite value.

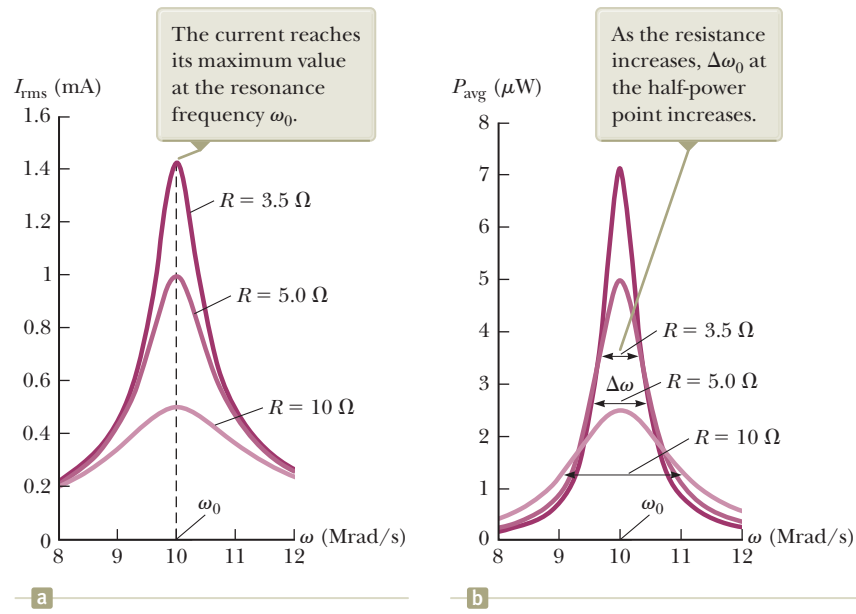
We can also calculate the average power as a function of frequency for a series *RLC* circuit. Using Equations 33.32, 33.33, and 33.25 gives

$$P_{\text{avg}} = I_{\text{rms}}^2 R = \frac{(\Delta V_{\text{rms}})^2}{Z^2} R = \frac{(\Delta V_{\text{rms}})^2 R}{R^2 + (X_L - X_C)^2} \quad (33.36)$$

Because $X_L = \omega L$, $X_C = 1/\omega C$, and $\omega_0^2 = 1/LC$, the term $(X_L - X_C)^2$ can be expressed as

$$(X_L - X_C)^2 = \left(\omega L - \frac{1}{\omega C} \right)^2 = \frac{L^2}{\omega^2} (\omega^2 - \omega_0^2)^2$$

Figure 33.17 (a) The rms current versus frequency for a series RLC circuit for three values of R . (b) Average power delivered to the circuit versus frequency for the series RLC circuit for three values of R .



Using this result in Equation 33.36 gives

$$P_{\text{avg}} = \frac{(\Delta V_{\text{rms}})^2 R \omega^2}{R^2 \omega^2 + L^2(\omega^2 - \omega_0^2)^2} \quad (33.37)$$

Average power as a function of frequency in an RLC circuit

Equation 33.37 shows that at resonance, when $\omega = \omega_0$, the average power is a maximum and has the value $(\Delta V_{\text{rms}})^2/R$. Figure 33.17b is a plot of average power versus frequency for three values of R in a series RLC circuit. As the resistance is made smaller, the curve becomes sharper in the vicinity of the resonance frequency. This curve sharpness is usually described by a dimensionless parameter known as the **quality factor**,² denoted by Q :

Quality factor

$$Q = \frac{\omega_0}{\Delta\omega}$$

where $\Delta\omega$ is the width of the curve measured between the two values of ω for which P_{avg} has one-half its maximum value, called the *half-power points* (see Fig. 33.17b). It is left as a problem (Problem 76) to show that the width at the half-power points has the value $\Delta\omega = R/L$ so that

$$Q = \frac{\omega_0 L}{R} \quad (33.38)$$

A radio's receiving circuit is an important application of a resonant circuit. The radio is tuned to a particular station (which transmits an electromagnetic wave or signal of a specific frequency) by varying a capacitor, which changes the receiving circuit's resonance frequency. When the circuit is driven by the electromagnetic oscillations a radio signal produces in an antenna, the tuner circuit responds with a large amplitude of electrical oscillation only for the station frequency that matches the resonance frequency. Therefore, only the signal from one radio station is passed on to the amplifier and loudspeakers even though signals from all stations are driving the circuit at the same time. Because many signals are often present over a range of frequencies, it is important to design a high- Q circuit to eliminate unwanted signals. In this manner, stations whose frequencies are near but not equal to the resonance frequency have a response at the receiver that is negligibly small relative to the signal that matches the resonance frequency.

²The quality factor is also defined as the ratio $2\pi E/\Delta E$, where E is the energy stored in the oscillating system and ΔE is the energy decrease per cycle of oscillation due to the resistance.

Example 33.6 A Resonating Series RLC Circuit

Consider a series RLC circuit for which $R = 150 \Omega$, $L = 20.0 \text{ mH}$, $\Delta V_{\text{rms}} = 20.0 \text{ V}$, and $\omega = 5\,000 \text{ s}^{-1}$. Determine the value of the capacitance for which the current is a maximum.

SOLUTION

Conceptualize Consider the circuit in Figure 33.13a and imagine varying the frequency of the AC source. The current in the circuit has its maximum value at the resonance frequency ω_0 .

Categorize We find the result by using equations developed in this section, so we categorize this example as a substitution problem.

Use Equation 33.35 to solve for the required capacitance in terms of the resonance frequency:

$$\omega_0 = \frac{1}{\sqrt{LC}} \rightarrow C = \frac{1}{\omega_0^2 L}$$

Substitute numerical values:

$$C = \frac{1}{(5.00 \times 10^3 \text{ s}^{-1})^2 (20.0 \times 10^{-3} \text{ H})} = 2.00 \mu\text{F}$$

33.8 The Transformer and Power Transmission

As discussed in Section 27.6, it is economical to use a high voltage and a low current to minimize the I^2R loss in transmission lines when electric power is transmitted over great distances. Consequently, 350-kV lines are common, and in many areas, even higher-voltage (765-kV) lines are used. At the receiving end of such lines, the consumer requires power at a low voltage (for safety and for efficiency in design). In practice, the voltage is decreased to approximately 20 000 V at a distribution substation, then to 4 000 V for delivery to residential areas, and finally to 120 V and 240 V at the customer's site. Therefore, a device is needed that can change the alternating voltage and current without causing appreciable changes in the power delivered. The AC transformer is that device.

In its simplest form, the **AC transformer** consists of two coils of wire wound around a core of iron as illustrated in Figure 33.18. (Compare this arrangement to Faraday's experiment in Figure 31.2.) The coil on the left, which is connected to the input alternating-voltage source and has N_1 turns, is called the *primary winding* (or the *primary*). The coil on the right, consisting of N_2 turns and connected to a load resistor R_L , is called the *secondary winding* (or the *secondary*). The purposes of the iron core are to increase the magnetic flux through the coil and to provide a medium in which nearly all the magnetic field lines through one coil pass through the other coil. Eddy-current losses are reduced by using a laminated core. Transformation of energy to internal energy in the finite resistance of the coil wires is usually quite small. Typical transformers have power efficiencies from 90% to

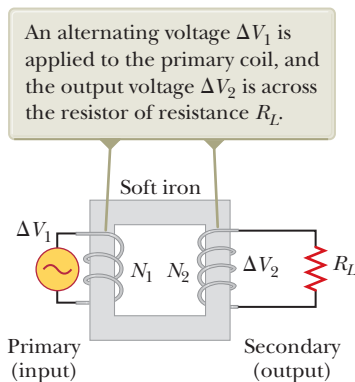


Figure 33.18 An ideal transformer consists of two coils wound on the same iron core.

99%. In the discussion that follows, let's assume we are working with an *ideal transformer*, one in which the energy losses in the windings and core are zero.

Faraday's law states that the voltage Δv_1 across the primary is

$$\Delta v_1 = -N_1 \frac{d\Phi_B}{dt} \quad (33.39)$$

where Φ_B is the magnetic flux through each turn. If we assume all magnetic field lines remain within the iron core, the flux through each turn of the primary equals the flux through each turn of the secondary. Hence, the voltage across the secondary is

$$\Delta v_2 = -N_2 \frac{d\Phi_B}{dt} \quad (33.40)$$

Solving Equation 33.39 for $d\Phi_B/dt$ and substituting the result into Equation 33.40 gives

$$\Delta v_2 = \frac{N_2}{N_1} \Delta v_1 \quad (33.41)$$

When $N_2 > N_1$, the output voltage Δv_2 exceeds the input voltage Δv_1 . This configuration is referred to as a *step-up transformer*. When $N_2 < N_1$, the output voltage is less than the input voltage, and we have a *step-down transformer*. A circuit diagram for a transformer connected to a load resistance is shown in Figure 33.19.

When a current I_1 exists in the primary circuit, a current I_2 is induced in the secondary. (In this discussion, uppercase I and ΔV refer to rms values.) If the load in the secondary circuit is a pure resistance, the induced current is in phase with the induced voltage. The power supplied to the secondary circuit must be provided by the AC source connected to the primary circuit. In an ideal transformer where there are no losses, the power $I_1 \Delta V_1$ supplied by the source is equal to the power $I_2 \Delta V_2$ in the secondary circuit. That is,


$$I_1 \Delta V_1 = I_2 \Delta V_2 \quad (33.42)$$

The value of the load resistance R_L determines the value of the secondary current because $I_2 = \Delta V_2/R_L$. Furthermore, the current in the primary is $I_1 = \Delta V_1/R_{\text{eq}}$, where

$$R_{\text{eq}} = \left(\frac{N_1}{N_2}\right)^2 R_L \quad (33.43)$$

is the equivalent resistance of the load resistance when viewed from the primary side. We see from this analysis that a transformer may be used to match resistances between the primary circuit and the load. In this manner, maximum power transfer can be achieved between a given power source and the load resistance. For example, a transformer connected between the 1-k Ω output of an audio amplifier and an 8- Ω speaker ensures that as much of the audio signal as possible is transferred into the speaker. In stereo terminology, this process is called *impedance matching*.

To operate properly, many common household electronic devices require low voltages. A small transformer that plugs directly into the wall like the one illustrated in Figure 33.20 can provide the proper voltage. The photograph shows the two windings wrapped around a common iron core that is found inside all these



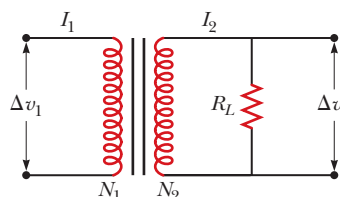
© Bettmann/CORBIS

Nikola Tesla

American Physicist (1856–1943)

Tesla was born in Croatia, but he spent most of his professional life as an inventor in the United States. He was a key figure in the development of alternating-current electricity, high-voltage transformers, and the transport of electrical power using AC transmission lines. Tesla's viewpoint was at odds with the ideas of Thomas Edison, who committed himself to the use of direct current in power transmission. Tesla's AC approach won out.

Figure 33.19 Circuit diagram for a transformer.





This transformer is smaller than the one in the opening photograph of this chapter. In addition, it is a step-down transformer. It drops the voltage from 4 000 V to 240 V for delivery to a group of residences.

The primary winding in this transformer is attached to the prongs of the plug, whereas the secondary winding is connected to the power cord on the right.




Figure 33.20 Electronic devices are often powered by AC adaptors containing transformers such as this one. These adaptors alter the AC voltage. In many applications, the adaptors also convert alternating current to direct current.

little “black boxes.” This particular transformer converts the 120-V AC in the wall socket to 12.5-V AC. (Can you determine the ratio of the numbers of turns in the two coils?) Some black boxes also make use of diodes to convert the alternating current to direct current. (See Section 33.9.)

Example 33.7 The Economics of AC Power

An electricity-generating station needs to deliver energy at a rate of 20 MW to a city 1.0 km away. A common voltage for commercial power generators is 22 kV, but a step-up transformer is used to boost the voltage to 230 kV before transmission.

(A) If the resistance of the wires is 2.0Ω and the energy costs are about $11\text{¢}/\text{kWh}$, estimate the cost of the energy converted to internal energy in the wires during one day.

SOLUTION

Conceptualize The resistance of the wires is in series with the resistance representing the load (homes and businesses). Therefore, there is a voltage drop in the wires, which means that some of the transmitted energy is converted to internal energy in the wires and never reaches the load.

Categorize This problem involves finding the power delivered to a resistive load in an AC circuit. Let's ignore any capacitive or inductive characteristics of the load and set the power factor equal to 1.

Analyze Calculate I_{rms} in the wires from Equation 33.31:

$$I_{\text{rms}} = \frac{P_{\text{avg}}}{\Delta V_{\text{rms}}} = \frac{20 \times 10^6 \text{ W}}{230 \times 10^3 \text{ V}} = 87 \text{ A}$$

Determine the rate at which energy is delivered to the resistance in the wires from Equation 33.32:

$$P_{\text{wires}} = I_{\text{rms}}^2 R = (87 \text{ A})^2 (2.0 \Omega) = 15 \text{ kW}$$

Calculate the energy T_{ET} delivered to the wires over the course of a day:

$$T_{\text{ET}} = P_{\text{wires}} \Delta t = (15 \text{ kW})(24 \text{ h}) = 363 \text{ kWh}$$

Find the cost of this energy at a rate of $11\text{¢}/\text{kWh}$:

$$\text{Cost} = (363 \text{ kWh})(\$0.11/\text{kWh}) = \$40$$

(B) Repeat the calculation for the situation in which the power plant delivers the energy at its original voltage of 22 kV.

continued

33.7 continued

SOLUTION

Calculate I_{rms} in the wires from Equation 33.31:

$$I_{\text{rms}} = \frac{P_{\text{avg}}}{\Delta V_{\text{rms}}} = \frac{20 \times 10^6 \text{ W}}{22 \times 10^3 \text{ V}} = 909 \text{ A}$$

From Equation 33.32, determine the rate at which energy is delivered to the resistance in the wires:

$$P_{\text{wires}} = I_{\text{rms}}^2 R = (909 \text{ A})^2 (2.0 \Omega) = 1.7 \times 10^3 \text{ kW}$$

Calculate the energy delivered to the wires over the course of a day:

$$T_{\text{ET}} = P_{\text{wires}} \Delta t = (1.7 \times 10^3 \text{ kW})(24 \text{ h}) = 4.0 \times 10^4 \text{ kWh}$$

Find the cost of this energy at a rate of 11¢/kWh:

$$\text{Cost} = (4.0 \times 10^4 \text{ kWh})(\$0.11/\text{kWh}) = \$4.4 \times 10^3$$

Finalize Notice the tremendous savings that are possible through the use of transformers and high-voltage transmission lines. Such savings in combination with the efficiency of using alternating current to operate motors led to the universal adoption of alternating current instead of direct current for commercial power grids.

33.9 Rectifiers and Filters

Portable electronic devices such as radios and laptop computers are often powered by direct current supplied by batteries. Many devices come with AC–DC converters such as that shown in Figure 33.20. Such a converter contains a transformer that steps the voltage down from 120 V to, typically, 6 V or 9 V and a circuit that converts alternating current to direct current. The AC–DC converting process is called **rectification**, and the converting device is called a **rectifier**.

The most important element in a rectifier circuit is a **diode**, a circuit element that conducts current in one direction but not the other. Most diodes used in modern electronics are semiconductor devices. The circuit symbol for a diode is $\text{---}\blacktriangleright\text{---}$, where the arrow indicates the direction of the current in the diode. A diode has low resistance to current in one direction (the direction of the arrow) and high resistance to current in the opposite direction. To understand how a diode rectifies a current, consider Figure 33.21a, which shows a diode and a resistor connected to the secondary of a transformer. The transformer reduces the voltage from 120-V AC to the lower voltage that is needed for the device having a resistance R (the load

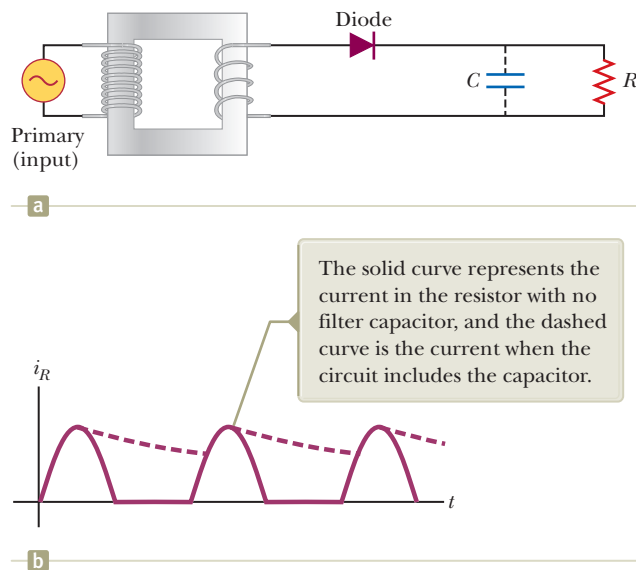


Figure 33.21 (a) A half-wave rectifier with an optional filter capacitor. (b) Current versus time in the resistor.

resistance). Because the diode conducts current in only one direction, the alternating current in the load resistor is reduced to the form shown by the solid curve in Figure 33.21b. The diode conducts current only when the side of the symbol containing the arrowhead has a positive potential relative to the other side. In this situation, the diode acts as a *half-wave rectifier* because current is present in the circuit only during half of each cycle.

When a capacitor is added to the circuit as shown by the dashed lines and the capacitor symbol in Figure 33.21a, the circuit is a simple DC power supply. The time variation of the current in the load resistor (the dashed curve in Fig. 33.21b) is close to being zero, as determined by the RC time constant of the circuit. As the current in the circuit begins to rise at $t = 0$ in Figure 33.21b, the capacitor charges up. When the current begins to fall, however, the capacitor discharges through the resistor, so the current in the resistor does not fall as quickly as the current from the transformer.

The RC circuit in Figure 33.21a is one example of a **filter circuit**, which is used to smooth out or eliminate a time-varying signal. For example, radios are usually powered by a 60-Hz alternating voltage. After rectification, the voltage still contains a small AC component at 60 Hz (sometimes called *ripple*), which must be filtered. By “filtered,” we mean that the 60-Hz ripple must be reduced to a value much less than that of the audio signal to be amplified because without filtering, the resulting audio signal includes an annoying hum at 60 Hz.

We can also design filters that respond differently to different frequencies. Consider the simple series RC circuit shown in Figure 33.22a. The input voltage is across the series combination of the two elements. The output is the voltage across the resistor. A plot of the ratio of the output voltage to the input voltage as a function of the logarithm of angular frequency (see Fig. 33.22b) shows that at low frequencies, ΔV_{out} is much smaller than ΔV_{in} , whereas at high frequencies, the two voltages are equal. Because the circuit preferentially passes signals of higher frequency while blocking low-frequency signals, the circuit is called an **RC high-pass filter**. (See Problem 54 for an analysis of this filter.)

Physically, a high-pass filter works because a capacitor “blocks out” direct current and AC current at low frequencies. At low frequencies, the capacitive reactance is large and much of the applied voltage appears across the capacitor rather than across the output resistor. As the frequency increases, the capacitive reactance drops and more of the applied voltage appears across the resistor.

Now consider the circuit shown in Figure 33.23a on page 1020, where we have interchanged the resistor and capacitor and where the output voltage is taken across the capacitor. At low frequencies, the reactance of the capacitor and the voltage across the capacitor is high. As the frequency increases, the voltage across the capacitor drops. Therefore, this filter is an **RC low-pass filter**. The ratio of output voltage to input voltage (see Problem 56), plotted as a function of the logarithm of ω in Figure 33.23b, shows this behavior.

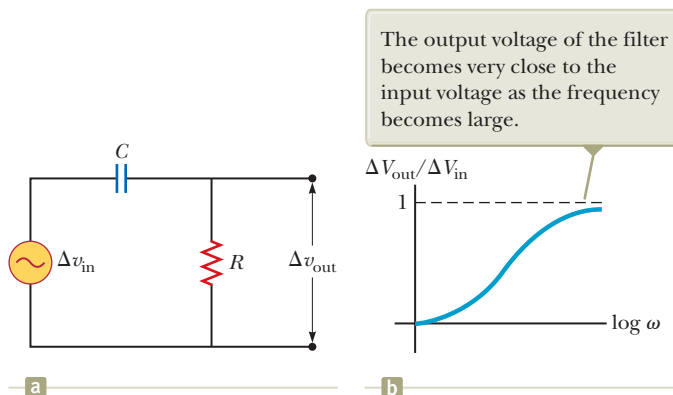
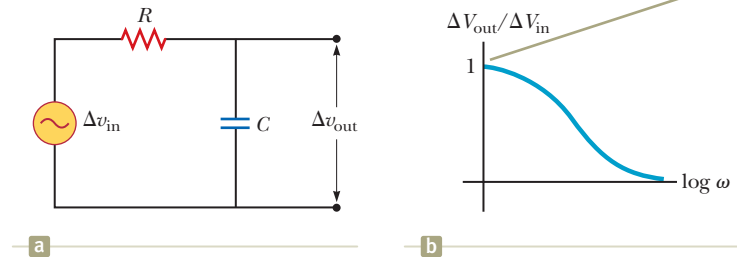


Figure 33.22 (a) A simple RC high-pass filter. (b) Ratio of output voltage to input voltage for an RC high-pass filter as a function of the angular frequency of the AC source.

Figure 33.23 (a) A simple RC low-pass filter. (b) Ratio of output voltage to input voltage for an RC low-pass filter as a function of the angular frequency of the AC source.



You may be familiar with crossover networks, which are an important part of the speaker systems for high-quality audio systems. These networks use low-pass filters to direct low frequencies to a special type of speaker, the “woofer,” which is designed to reproduce the low notes accurately. The high frequencies are sent by a high-pass filter to the “tweeter” speaker.

Summary

Definitions

In AC circuits that contain inductors and capacitors, it is useful to define the **inductive reactance** X_L and the **capacitive reactance** X_C as

$$X_L \equiv \omega L \quad (33.10)$$

$$X_C \equiv \frac{1}{\omega C} \quad (33.18)$$

where ω is the angular frequency of the AC source. The SI unit of reactance is the ohm.

The **impedance** Z of an RLC series AC circuit is

$$Z \equiv \sqrt{R^2 + (X_L - X_C)^2} \quad (33.25)$$

This expression illustrates that we cannot simply add the resistance and reactances in a circuit. We must account for the applied voltage and current being out of phase, with the **phase angle** ϕ between the current and voltage being

$$\phi = \tan^{-1} \left(\frac{X_L - X_C}{R} \right) \quad (33.27)$$

The sign of ϕ can be positive or negative, depending on whether X_L is greater or less than X_C . The phase angle is zero when $X_L = X_C$.

Concepts and Principles

The **rms current** and **rms voltage** in an AC circuit in which the voltages and current vary sinusoidally are given by

$$I_{\text{rms}} = \frac{I_{\text{max}}}{\sqrt{2}} = 0.707 I_{\text{max}} \quad (33.4)$$

$$\Delta V_{\text{rms}} = \frac{\Delta V_{\text{max}}}{\sqrt{2}} = 0.707 \Delta V_{\text{max}} \quad (33.5)$$

where I_{max} and ΔV_{max} are the maximum values.

If an AC circuit consists of a source and a resistor, the current is in phase with the voltage. That is, the current and voltage reach their maximum values at the same time.

If an AC circuit consists of a source and an inductor, the current lags the voltage by 90° . That is, the voltage reaches its maximum value one-quarter of a period before the current reaches its maximum value.

If an AC circuit consists of a source and a capacitor, the current leads the voltage by 90° . That is, the current reaches its maximum value one-quarter of a period before the voltage reaches its maximum value.

The **average power** delivered by the source in an RLC circuit is

$$P_{\text{avg}} = I_{\text{rms}} \Delta V_{\text{rms}} \cos \phi \quad (33.31)$$

An equivalent expression for the average power is

$$P_{\text{avg}} = I_{\text{rms}}^2 R \quad (33.32)$$

The average power delivered by the source results in increasing internal energy in the resistor. No power loss occurs in an ideal inductor or capacitor.

A series RLC circuit is in resonance when the inductive reactance equals the capacitive reactance. When this condition is met, the rms current given by Equation 33.34 has its maximum value. The **resonance frequency** ω_0 of the circuit is

$$\omega_0 = \frac{1}{\sqrt{LC}} \quad (33.35)$$

The rms current in a series RLC circuit has its maximum value when the frequency of the source equals ω_0 , that is, when the “driving” frequency matches the resonance frequency.

The rms current in a series RLC circuit is

$$I_{\text{rms}} = \frac{\Delta V_{\text{rms}}}{\sqrt{R^2 + (X_L - X_C)^2}} \quad (33.34)$$

AC transformers allow for easy changes in alternating voltage according to

$$\Delta v_2 = \frac{N_2}{N_1} \Delta v_1 \quad (33.41)$$

where N_1 and N_2 are the numbers of windings on the primary and secondary coils, respectively, and Δv_1 and Δv_2 are the voltages on these coils.

Objective Questions

1. denotes answer available in *Student Solutions Manual/Study Guide*

1. An inductor and a resistor are connected in series across an AC source as in Figure OQ33.1. Immediately after the switch is closed, which of the following statements is true? (a) The current in the circuit is $\Delta V/R$. (b) The voltage across the inductor is zero. (c) The current in the circuit is zero. (d) The voltage across the resistor is ΔV . (e) The voltage across the inductor is half its maximum value.

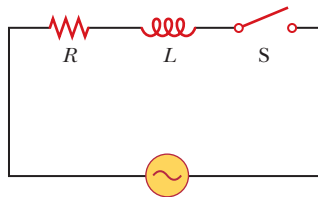


Figure OQ33.1

2. (i) When a particular inductor is connected to a source of sinusoidally varying emf with constant amplitude and a frequency of 60.0 Hz, the rms current is 3.00 A. What is the rms current if the source frequency is doubled? (a) 12.0 A (b) 6.00 A (c) 4.24 A (d) 3.00 A (e) 1.50 A (ii) Repeat part (i) assuming the load is a capacitor instead of an inductor. (iii) Repeat part (i) assuming the load is a resistor instead of an inductor.
3. A capacitor and a resistor are connected in series across an AC source as shown in Figure OQ33.3. After the switch is closed, which of the following statements is true? (a) The voltage across the capacitor lags the current by 90° . (b) The voltage across the resistor is out of phase with the current. (c) The voltage across the capacitor leads the current by 90° . (d) The current decreases as the frequency of the source is increased,

but its peak voltage remains the same. (e) None of those statements is correct.

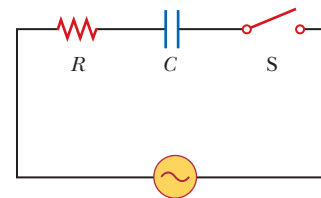


Figure OQ33.3

4. (i) What is the time average of the “square-wave” potential shown in Figure OQ33.4? (a) $\sqrt{2} \Delta V_{\text{max}}$ (b) ΔV_{max} (c) $\Delta V_{\text{max}}/\sqrt{2}$ (d) $\Delta V_{\text{max}}/2$ (e) $\Delta V_{\text{max}}/4$ (ii) What is the rms voltage? Choose from the same possibilities as in part (i).

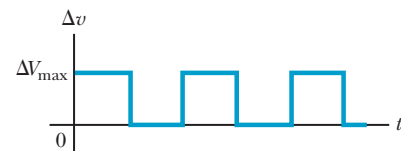


Figure OQ33.4

5. If the voltage across a circuit element has its maximum value when the current in the circuit is zero, which of the following statements *must* be true? (a) The circuit element is a resistor. (b) The circuit element is a capacitor. (c) The circuit element is an inductor. (d) The current and voltage are 90° out of phase. (e) The current and voltage are 180° out of phase.
6. A sinusoidally varying potential difference has amplitude 170 V. (i) What is its minimum instantaneous

- value? (a) 170 V (b) 120 V (c) 0 (d) -120 V (e) -170 V
(ii) What is its average value? **(iii)** What is its rms value? Choose from the same possibilities as in part (i) in each case.
7. A series RLC circuit contains a $20.0\text{-}\Omega$ resistor, a $0.750\text{-}\mu\text{F}$ capacitor, and a 120-mH inductor. **(i)** If a sinusoidally varying rms voltage of 120 V at $f = 500$ Hz is applied across this combination of elements, what is the rms current in the circuit? (a) 2.33 A (b) 6.00 A (c) 10.0 A (d) 17.0 A (e) none of those answers **(ii) What If?** What is the rms current in the circuit when operating at its resonance frequency? Choose from the same possibilities as in part (i).
8. A resistor, a capacitor, and an inductor are connected in series across an AC source. Which of the following statements is *false*? (a) The instantaneous voltage across the capacitor lags the current by 90° . (b) The instantaneous voltage across the inductor leads the current by 90° . (c) The instantaneous voltage across the resistor is in phase with the current. (d) The voltages across the resistor, capacitor, and inductor are not in phase. (e) The rms voltage across the combination of the three elements equals the algebraic sum of the rms voltages across each element separately.
9. Under what conditions is the impedance of a series RLC circuit equal to the resistance in the circuit? (a) The driving frequency is lower than the resonance frequency. (b) The driving frequency is equal to the resonance frequency. (c) The driving frequency is higher than the resonance frequency. (d) always (e) never
10. What is the phase angle in a series RLC circuit at resonance? (a) 180° (b) 90° (c) 0 (d) -90° (e) None of those answers is necessarily correct.
11. A circuit containing an AC source, a capacitor, an inductor, and a resistor has a high- Q resonance at $1\,000$ Hz. From greatest to least, rank the following contributions to the impedance of the circuit at that frequency and at lower and higher frequencies. Note any cases of equality in your ranking. (a) X_C at 500 Hz (b) X_C at $1\,500$ Hz (c) X_L at 500 Hz (d) X_L at $1\,500$ Hz (e) R at $1\,000$ Hz
12. A 6.00-V battery is connected across the primary coil of a transformer having 50 turns. If the secondary coil of the transformer has 100 turns, what voltage appears across the secondary? (a) 24.0 V (b) 12.0 V (c) 6.00 V (d) 3.00 V (e) none of those answers
13. Do AC ammeters and voltmeters read (a) peak-to-valley, (b) maximum, (c) rms, or (d) average values?

Conceptual Questions

I. denotes answer available in *Student Solutions Manual/Study Guide*

1. (a) Explain how the quality factor is related to the response characteristics of a radio receiver. (b) Which variable most strongly influences the quality factor?
2. (a) Explain how the mnemonic “ELI the ICE man” can be used to recall whether current leads voltage or voltage leads current in RLC circuits. Note that E represents emf \mathcal{E} . (b) Explain how “CIVIL” works as another mnemonic device, where V represents voltage.
3. Why is the sum of the maximum voltages across each element in a series RLC circuit usually greater than the maximum applied voltage? Doesn't that inequality violate Kirchhoff's loop rule?
- 4.** (a) Does the phase angle in an RLC series circuit depend on frequency? (b) What is the phase angle for the circuit when the inductive reactance equals the capacitive reactance?
5. Do some research to answer these questions: Who invented the metal detector? Why? What are its limitations?
6. As shown in Figure CQ33.6, a person pulls a vacuum cleaner at speed v across a horizontal floor, exerting

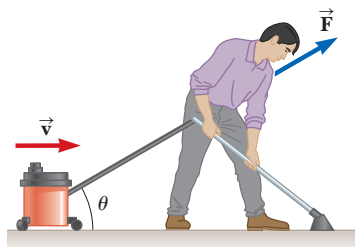


Figure CQ33.6

- on it a force of magnitude F directed upward at an angle θ with the horizontal. (a) At what rate is the person doing work on the cleaner? (b) State as completely as you can the analogy between power in this situation and in an electric circuit.
7. A certain power supply can be modeled as a source of emf in series with both a resistance of $10\ \Omega$ and an inductive reactance of $5\ \Omega$. To obtain maximum power delivered to the load, it is found that the load should have a resistance of $R_L = 10\ \Omega$, an inductive reactance of zero, and a capacitive reactance of $5\ \Omega$. (a) With this load, is the circuit in resonance? (b) With this load, what fraction of the average power put out by the source of emf is delivered to the load? (c) To increase the fraction of the power delivered to the load, how could the load be changed? You may wish to review Example 28.2 and Problem 4 in Chapter 28 on maximum power transfer in DC circuits.
- 8.** Will a transformer operate if a battery is used for the input voltage across the primary? Explain.
9. (a) Why does a capacitor act as a short circuit at high frequencies? (b) Why does a capacitor act as an open circuit at low frequencies?
10. An ice storm breaks a transmission line and interrupts electric power to a town. A homeowner starts a gasoline-powered 120-V generator and clips its output terminals to “hot” and “ground” terminals of the electrical panel for his house. On a power pole down the block is a transformer designed to step down the voltage for household use. It has a ratio of turns N_1/N_2 of 100 to 1 . A repairman climbs the pole. What voltage

will he encounter on the input side of the transformer? As this question implies, safety precautions must be

taken in the use of home generators and during power failures in general.

Problems

ENHANCED WebAssign The problems found in this chapter may be assigned online in Enhanced WebAssign

1. straightforward; 2. intermediate; 3. challenging

1. full solution available in the *Student Solutions Manual/Study Guide*

AMT Analysis Model tutorial available in Enhanced WebAssign

GP Guided Problem

M Master It tutorial available in Enhanced WebAssign

W Watch It video solution available in Enhanced WebAssign

Section 33.1 AC Sources

Section 33.2 Resistors in an AC Circuit

- When an AC source is connected across a $12.0\text{-}\Omega$ resistor, the rms current in the resistor is 8.00 A . Find (a) the rms voltage across the resistor, (b) the peak voltage of the source, (c) the maximum current in the resistor, and (d) the average power delivered to the resistor.
- (a) What is the resistance of a lightbulb that uses an average power of 75.0 W when connected to a 60.0-Hz power source having a maximum voltage of 170 V ? (b) **What If?** What is the resistance of a 100-W lightbulb?
- An AC power supply produces a maximum voltage $\Delta V_{\text{max}} = 100\text{ V}$. This power supply is connected to a resistor $R = 24.0\text{ }\Omega$, and the current and resistor voltage are measured with an ideal AC ammeter and voltmeter as shown in Figure P33.3. An ideal ammeter has zero resistance, and an ideal voltmeter has infinite resistance. What is the reading on (a) the ammeter and (b) the voltmeter?

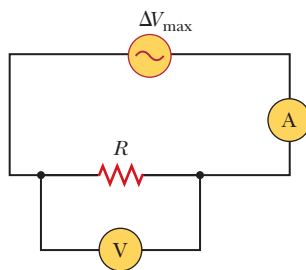


Figure P33.3

- A certain lightbulb is rated at 60.0 W when operating at an rms voltage of 120 V . (a) What is the peak voltage applied across the bulb? (b) What is the resistance of the bulb? (c) Does a 100-W bulb have greater or less resistance than a 60.0-W bulb? Explain.

5. The current in the circuit shown in Figure P33.5 equals 60.0% of the peak current at $t = 7.00\text{ ms}$.

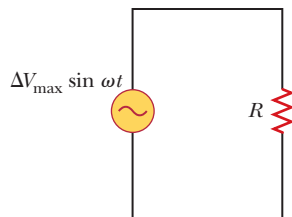


Figure P33.5

Problems 5 and 6.

What is the lowest source frequency that gives this current?

- In the AC circuit shown in Figure P33.5, $R = 70.0\text{ }\Omega$ and the output voltage of the AC source is $\Delta V_{\text{max}} \sin \omega t$. (a) If $\Delta V_R = 0.250 \Delta V_{\text{max}}$ for the first time at $t = 0.010\text{ s}$, what is the angular frequency of the source? (b) What is the next value of t for which $\Delta V_R = 0.250 \Delta V_{\text{max}}$?
- An audio amplifier, represented by the AC source and resistor in Figure P33.7, delivers to the speaker alternating voltage at audio frequencies. If the source voltage has an amplitude of 15.0 V , $R = 8.20\text{ }\Omega$, and the speaker is equivalent to a resistance of $10.4\text{ }\Omega$, what is the time-averaged power transferred to it?

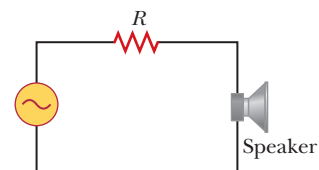


Figure P33.7

- Figure P33.8 shows three lightbulbs connected to a 120-V AC (rms) household supply voltage. Bulbs 1 and 2 have a power rating of 150 W , and bulb 3 has a 100-W rating. Find (a) the rms current in each bulb and (b) the resistance of each bulb. (c) What is the total resistance of the combination of the three lightbulbs?

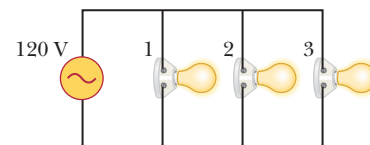


Figure P33.8

Section 33.3 Inductors in an AC Circuit

- An inductor has a $54.0\text{-}\Omega$ reactance when connected to a 60.0-Hz source. The inductor is removed and then connected to a 50.0-Hz source that produces a 100-V rms voltage. What is the maximum current in the inductor?

10. In a purely inductive AC circuit as shown in Figure P33.10 (page 1024), $\Delta V_{\text{max}} = 100\text{ V}$. (a) The maximum

current is 7.50 A at 50.0 Hz. Calculate the inductance L . (b) **What If?** At what angular frequency ω is the maximum current 2.50 A?

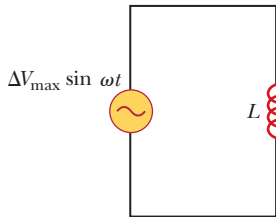


Figure P33.10 Problems 10 and 11.

- 11.** For the circuit shown in Figure P33.10, $\Delta V_{\max} = 80.0$ V, $\omega = 65.0\pi$ rad/s, and $L = 70.0$ mH. Calculate the current in the inductor at $t = 15.5$ ms.
- 12.** An inductor is connected to an AC power supply having a maximum output voltage of 4.00 V at a frequency of 300 Hz. What inductance is needed to keep the rms current less than 2.00 mA?
- 13.** An AC source has an output rms voltage of 78.0 V at a frequency of 80.0 Hz. If the source is connected across a 25.0-mH inductor, what are (a) the inductive reactance of the circuit, (b) the rms current in the circuit, and (c) the maximum current in the circuit?
- 14.** A 20.0-mH inductor is connected to a North American electrical outlet ($\Delta V_{\text{rms}} = 120$ V, $f = 60.0$ Hz). Assuming the energy stored in the inductor is zero at $t = 0$, determine the energy stored at $t = \frac{1}{180}$ s.
- 15. Review.** Determine the maximum magnetic flux through an inductor connected to a North American electrical outlet ($\Delta V_{\text{rms}} = 120$ V, $f = 60.0$ Hz).
- 16.** The output voltage of an AC source is given by $\Delta v = 120 \sin 30.0\pi t$, where Δv is in volts and t is in seconds. The source is connected across a 0.500-H inductor. Find (a) the frequency of the source, (b) the rms voltage across the inductor, (c) the inductive reactance of the circuit, (d) the rms current in the inductor, and (e) the maximum current in the inductor.

Section 33.4 Capacitors in an AC Circuit

- 17.** A 1.00-mF capacitor is connected to a North American electrical outlet ($\Delta V_{\text{rms}} = 120$ V, $f = 60.0$ Hz). Assuming the energy stored in the capacitor is zero at $t = 0$, determine the magnitude of the current in the wires at $t = \frac{1}{180}$ s.
- 18.** An AC source with an output rms voltage of 36.0 V at a frequency of 60.0 Hz is connected across a 12.0- μF capacitor. Find (a) the capacitive reactance, (b) the rms current, and (c) the maximum current in the circuit. (d) Does the capacitor have its maximum charge when the current has its maximum value? Explain.
- 19.** (a) For what frequencies does a 22.0- μF capacitor have a reactance below 175 Ω ? (b) **What If?** What is the reactance of a 44.0- μF capacitor over this same frequency range?

- 20.** A source delivers an AC voltage of the form $\Delta v = 98.0 \sin 80\pi t$, where Δv is in volts and t is in seconds, to a capacitor. The maximum current in the circuit is 0.500 A. Find (a) the rms voltage of the source, (b) the frequency of the source, and (c) the value of the capacitance.
- 21.** What maximum current is delivered by an AC source with $\Delta V_{\max} = 48.0$ V and $f = 90.0$ Hz when connected across a 3.70- μF capacitor?
- 22.** A capacitor C is connected to a power supply that operates at a frequency f and produces an rms voltage ΔV . What is the maximum charge that appears on either capacitor plate?
- 23.** What is the maximum current in a 2.20- μF capacitor when it is connected across (a) a North American electrical outlet having $\Delta V_{\text{rms}} = 120$ V and $f = 60.0$ Hz and (b) a European electrical outlet having $\Delta V_{\text{rms}} = 240$ V and $f = 50.0$ Hz?

Section 33.5 The RLC Series Circuit

- 24.** An AC source with $\Delta V_{\max} = 150$ V and $f = 50.0$ Hz is connected between points a and d in Figure P33.24. Calculate the maximum voltages between (a) points a and b , (b) points b and c , (c) points c and d , and (d) points b and d .

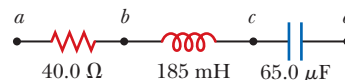


Figure P33.24 Problems 24 and 81.

- 25.** In addition to phasor diagrams showing voltages such as in Figure 33.15, we can draw phasor diagrams with resistance and reactances. The resultant of adding the phasors is the impedance. Draw to scale a phasor diagram showing Z , X_L , X_C , and ϕ for an AC series circuit for which $R = 300$ Ω , $C = 11.0$ μF , $L = 0.200$ H, and $f = 500/\pi$ Hz.
- 26.** A sinusoidal voltage $\Delta v = 40.0 \sin 100t$, where Δv is in volts and t is in seconds, is applied to a series RLC circuit with $L = 160$ mH, $C = 99.0$ μF , and $R = 68.0$ Ω . (a) What is the impedance of the circuit? (b) What is the maximum current? Determine the numerical values for (c) ω and (d) ϕ in the equation $i = I_{\max} \sin(\omega t - \phi)$.
- 27.** A series AC circuit contains a resistor, an inductor of 150 mH, a capacitor of 5.00 μF , and a source with $\Delta V_{\max} = 240$ V operating at 50.0 Hz. The maximum current in the circuit is 100 mA. Calculate (a) the inductive reactance, (b) the capacitive reactance, (c) the impedance, (d) the resistance in the circuit, and (e) the phase angle between the current and the source voltage.
- 28.** At what frequency does the inductive reactance of a 57.0- μH inductor equal the capacitive reactance of a 57.0- μF capacitor?
- 29.** An RLC circuit consists of a 150- Ω resistor, a 21.0- μF capacitor, and a 460-mH inductor connected in series with a 120-V, 60.0-Hz power supply. (a) What is the phase

- angle between the current and the applied voltage?
 (b) Which reaches its maximum earlier, the current or the voltage?
30. Draw phasors to scale for the following voltages in SI units: (a) $25.0 \sin \omega t$ at $\omega t = 90.0^\circ$, (b) $30.0 \sin \omega t$ at $\omega t = 60.0^\circ$, and (c) $18.0 \sin \omega t$ at $\omega t = 300^\circ$.
31. **M** An inductor ($L = 400 \text{ mH}$), a capacitor ($C = 4.43 \mu\text{F}$), and a resistor ($R = 500 \Omega$) are connected in series. A 50.0-Hz AC source produces a peak current of 250 mA in the circuit. (a) Calculate the required peak voltage ΔV_{max} . (b) Determine the phase angle by which the current leads or lags the applied voltage.
32. A $60.0\text{-}\Omega$ resistor is connected in series with a $30.0\text{-}\mu\text{F}$ capacitor and a source whose maximum voltage is 120 V , operating at 60.0 Hz . Find (a) the capacitive reactance of the circuit, (b) the impedance of the circuit, and (c) the maximum current in the circuit. (d) Does the voltage lead or lag the current? (e) How will adding an inductor in series with the existing resistor and capacitor affect the current? Explain.
33. **Review.** In an RLC series circuit that includes a source of alternating current operating at fixed frequency and voltage, the resistance R is equal to the inductive reactance. If the plate separation of the parallel-plate capacitor is reduced to one-half its original value, the current in the circuit doubles. Find the initial capacitive reactance in terms of R .

Section 33.6 Power in an AC Circuit

34. Why is the following situation impossible? A series circuit consists of an ideal AC source (no inductance or capacitance in the source itself) with an rms voltage of ΔV at a frequency f and a magnetic buzzer with a resistance R and an inductance L . By carefully adjusting the inductance L of the circuit, a power factor of exactly 1.00 is attained.
35. A series RLC circuit has a resistance of 45.0Ω and an impedance of 75.0Ω . What average power is delivered to this circuit when $\Delta V_{\text{rms}} = 210 \text{ V}$?
36. **M** An AC voltage of the form $\Delta v = 100 \sin 1000t$, where Δv is in volts and t is in seconds, is applied to a series RLC circuit. Assume the resistance is 400Ω , the capacitance is $5.00 \mu\text{F}$, and the inductance is 0.500 H . Find the average power delivered to the circuit.
37. A series RLC circuit has a resistance of 22.0Ω and an impedance of 80.0Ω . If the rms voltage applied to the circuit is 160 V , what average power is delivered to the circuit?
38. An AC voltage of the form $\Delta v = 90.0 \sin 350t$, where Δv is in volts and t is in seconds, is applied to a series RLC circuit. If $R = 50.0 \Omega$, $C = 25.0 \mu\text{F}$, and $L = 0.200 \text{ H}$, find (a) the impedance of the circuit, (b) the rms current in the circuit, and (c) the average power delivered to the circuit.
39. **M** In a certain series RLC circuit, $I_{\text{rms}} = 9.00 \text{ A}$, $\Delta V_{\text{rms}} = 180 \text{ V}$, and the current leads the voltage by 37.0° .

- (a) What is the total resistance of the circuit? (b) Calculate the reactance of the circuit ($X_L - X_C$).

40. **W** Suppose you manage a factory that uses many electric motors. The motors create a large inductive load to the electric power line as well as a resistive load. The electric company builds an extra-heavy distribution line to supply you with two components of current: one that is 90° out of phase with the voltage and another that is in phase with the voltage. The electric company charges you an extra fee for “reactive volt-amps” in addition to the amount you pay for the energy you use. You can avoid the extra fee by installing a capacitor between the power line and your factory. The following problem models this solution.

In an RL circuit, a 120-V (rms), 60.0-Hz source is in series with a 25.0-mH inductor and a $20.0\text{-}\Omega$ resistor. What are (a) the rms current and (b) the power factor? (c) What capacitor must be added in series to make the power factor equal to 1 ? (d) To what value can the supply voltage be reduced if the power supplied is to be the same as before the capacitor was installed?

41. A diode is a device that allows current to be carried in only one direction (the direction indicated by the arrowhead in its circuit symbol). Find the average power delivered to the diode circuit of Figure P33.41 in terms of ΔV_{rms} and R .

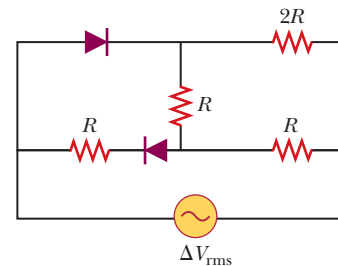


Figure P33.41

Section 33.7 Resonance in a Series RLC Circuit

42. **M** A series RLC circuit has components with the following values: $L = 20.0 \text{ mH}$, $C = 100 \text{ nF}$, $R = 20.0 \Omega$, and $\Delta V_{\text{max}} = 100 \text{ V}$, with $\Delta v = \Delta V_{\text{max}} \sin \omega t$. Find (a) the resonant frequency of the circuit, (b) the amplitude of the current at the resonant frequency, (c) the Q of the circuit, and (d) the amplitude of the voltage across the inductor at resonance.
43. **AMT** An RLC circuit is used in a radio to tune into an FM station broadcasting at $f = 99.7 \text{ MHz}$. The resistance in the circuit is $R = 12.0 \Omega$, and the inductance is $L = 1.40 \mu\text{H}$. What capacitance should be used?
44. The LC circuit of a radar transmitter oscillates at 9.00 GHz . (a) What inductance is required for the circuit to resonate at this frequency if its capacitance is 2.00 pF ? (b) What is the inductive reactance of the circuit at this frequency?
45. A $10.0\text{-}\Omega$ resistor, 10.0-mH inductor, and $100\text{-}\mu\text{F}$ capacitor are connected in series to a 50.0-V (rms) source

having variable frequency. If the operating frequency is twice the resonance frequency, find the energy delivered to the circuit during one period.

46. A resistor R , inductor L , and capacitor C are connected in series to an AC source of rms voltage ΔV and variable frequency. If the operating frequency is twice the resonance frequency, find the energy delivered to the circuit during one period.
47. **Review.** A radar transmitter contains an LC circuit oscillating at 1.00×10^{10} Hz. (a) For a one-turn loop having an inductance of 400 pH to resonate at this frequency, what capacitance is required in series with the loop? (b) The capacitor has square, parallel plates separated by 1.00 mm of air. What should the edge length of the plates be? (c) What is the common reactance of the loop and capacitor at resonance?

Section 33.8 The Transformer and Power Transmission

48. A step-down transformer is used for recharging the batteries of portable electronic devices. The turns ratio N_2/N_1 for a particular transformer used in a DVD player is 1:13. When used with 120-V (rms) household service, the transformer draws an rms current of 20.0 mA from the house outlet. Find (a) the rms output voltage of the transformer and (b) the power delivered to the DVD player.

49. The primary coil of a transformer has $N_1 = 350$ turns, and the secondary coil has $N_2 = 2\,000$ turns. If the input voltage across the primary coil is $\Delta v = 170 \cos \omega t$, where Δv is in volts and t is in seconds, what rms voltage is developed across the secondary coil?

50. **AMT** A transmission line that has a resistance per unit length of $4.50 \times 10^{-4} \Omega/\text{m}$ is to be used to transmit 5.00 MW across 400 mi (6.44×10^5 m). The output voltage of the source is 4.50 kV. (a) What is the line loss if a transformer is used to step up the voltage to 500 kV? (b) What fraction of the input power is lost to the line under these circumstances? (c) **What If?** What difficulties would be encountered in attempting to transmit the 5.00 MW at the source voltage of 4.50 kV?

51. In the transformer shown in Figure P33.51, the load resistance R_L is 50.0Ω . The turns ratio N_1/N_2 is 2.50, and the rms source voltage is $\Delta V_s = 80.0$ V. If a voltmeter across the load resistance measures an rms voltage of 25.0 V, what is the source resistance R_s ?

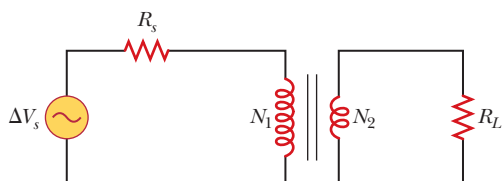


Figure P33.51

52. A person is working near the secondary of a transformer as shown in Figure P33.52. The primary voltage is 120 V at 60.0 Hz. The secondary voltage is

5 000 V. The capacitance C_s , which is the stray capacitance between the hand and the secondary winding, is 20.0 pF. Assuming the person has a body resistance to ground of $R_b = 50.0 \text{ k}\Omega$, determine the rms voltage across the body. *Suggestion:* Model the secondary of the transformer as an AC source.

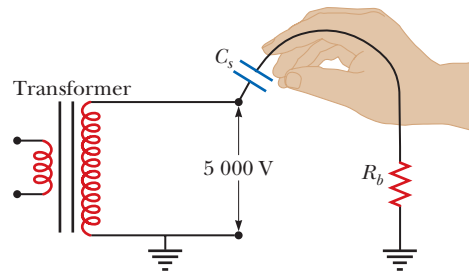


Figure P33.52

Section 33.9 Rectifiers and Filters

53. The RC high-pass filter shown in Figure P33.53 has a resistance $R = 0.500 \Omega$ and a capacitance $C = 613 \mu\text{F}$. What is the ratio of the amplitude of the output voltage to that of the input voltage for this filter for a source frequency of 600 Hz?

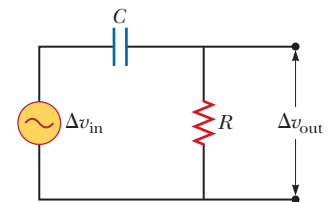


Figure P33.53
Problems 53 and 54.

54. Consider the RC high-pass filter circuit shown in Figure P33.53. (a) Find an expression for the ratio of the amplitude of the output voltage to that of the input voltage in terms of R , C , and the AC source frequency ω . (b) What value does this ratio approach as the frequency decreases toward zero? (c) What value does this ratio approach as the frequency increases without limit?

55. One particular plug-in power supply for a radio looks similar to the one shown in Figure 33.20 and is marked with the following information: Input 120 V AC 8 W Output 9 V DC 300 mA. Assume these values are accurate to two digits. (a) Find the energy efficiency of the device when the radio is operating. (b) At what rate is energy wasted in the device when the radio is operating? (c) Suppose the input power to the transformer is 8.00 W when the radio is switched off and energy costs $\$0.110/\text{kWh}$ from the electric company. Find the cost of having six such transformers around the house, each plugged in for 31 days.

56. Consider the filter circuit shown in Figure P33.56. (a) Show that the ratio of the amplitude of the output voltage to that of the input voltage is

$$\frac{\Delta V_{\text{out}}}{\Delta V_{\text{in}}} = \frac{1/\omega C}{\sqrt{R^2 + \left(\frac{1}{\omega C}\right)^2}}$$

- (b) What value does this ratio approach as the frequency decreases toward zero? (c) What value does this ratio approach as the frequency increases without limit? (d) At what frequency is the ratio equal to one-half?

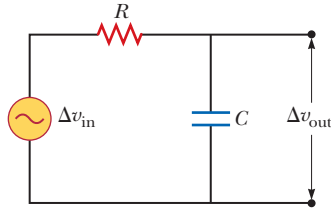


Figure P33.56

Additional Problems

57. A step-up transformer is designed to have an output voltage of 2 200 V (rms) when the primary is connected across a 110-V (rms) source. (a) If the primary winding has exactly 80 turns, how many turns are required on the secondary? (b) If a load resistor across the secondary draws a current of 1.50 A, what is the current in the primary, assuming ideal conditions? (c) **What If?** If the transformer actually has an efficiency of 95.0%, what is the current in the primary when the secondary current is 1.20 A?

58. Why is the following situation impossible? An RLC circuit is used in a radio to tune into a North American AM commercial radio station. The values of the circuit components are $R = 15.0 \Omega$, $L = 2.80 \mu\text{H}$, and $C = 0.910 \text{ pF}$.

59. **Review.** The voltage phasor diagram for a certain series RLC circuit is shown in Figure P33.59. The resistance of the circuit is 75.0Ω , and the frequency is 60.0 Hz. Find (a) the maximum voltage ΔV_{max} , (b) the phase angle ϕ , (c) the maximum current, (d) the impedance, (e) the capacitance and (f) the inductance of the circuit, and (g) the average power delivered to the circuit.

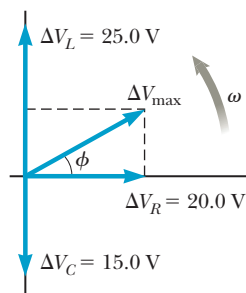


Figure P33.59

60. Consider a series RLC circuit having the parameters $R = 200 \Omega$, $L = 663 \text{ mH}$, and $C = 26.5 \mu\text{F}$. The applied voltage has an amplitude of 50.0 V and a frequency of 60.0 Hz. Find (a) the current I_{max} and its phase relative to the applied voltage Δv , (b) the maximum voltage ΔV_R across the resistor and its phase relative to the current, (c) the maximum voltage ΔV_C across the capacitor and its phase relative to the current, and (d) the maxi-

imum voltage ΔV_L across the inductor and its phase relative to the current.

61. Energy is to be transmitted over a pair of copper wires in a transmission line at the rate of 20.0 kW with only a 1.00% loss over a distance of 18.0 km at potential difference $\Delta V_{\text{rms}} = 1.50 \times 10^3 \text{ V}$ between the wires. Assuming the current density is uniform in the conductors, what is the diameter required for each of the two wires?
62. Energy is to be transmitted over a pair of copper wires in a transmission line at a rate P with only a fractional loss f over a distance ℓ at potential difference ΔV_{rms} between the wires. Assuming the current density is uniform in the conductors, what is the diameter required for each of the two wires?
63. A $400\text{-}\Omega$ resistor, an inductor, and a capacitor are in series with an AC source. The reactance of the inductor is 700Ω , and the circuit impedance is 760Ω . (a) What are the possible values of the reactance of the capacitor? (b) If you find that the power delivered to the circuit decreases as you raise the frequency, what is the capacitive reactance in the original circuit? (c) Repeat part (a) assuming the resistance is 200Ω instead of 400Ω and the circuit impedance continues to be 760Ω .
64. Show that the rms value for the sawtooth voltage shown in Figure P33.64 is $\Delta V_{\text{max}}/\sqrt{3}$.

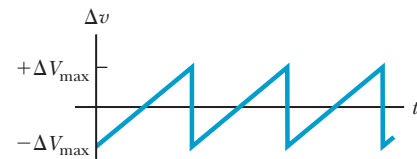


Figure P33.64

65. A transformer may be used to provide maximum power transfer between two AC circuits that have different impedances Z_1 and Z_2 . This process is called *impedance matching*. (a) Show that the ratio of turns N_1/N_2 for this transformer is

$$\frac{N_1}{N_2} = \sqrt{\frac{Z_1}{Z_2}}$$

(b) Suppose you want to use a transformer as an impedance-matching device between an audio amplifier that has an output impedance of $8.00 \text{ k}\Omega$ and a speaker that has an input impedance of 8.00Ω . What should your N_1/N_2 ratio be?

66. A capacitor, a coil, and two resistors of equal resistance are arranged in an AC circuit as shown in Figure P33.66 (page 1028). An AC source provides an emf of $\Delta V_{\text{rms}} = 20.0 \text{ V}$ at a frequency of 60.0 Hz. When the double-throw switch S is open as shown in the figure, the rms current is 183 mA. When the switch is closed in position *a*, the rms current is 298 mA. When the switch is closed in position *b*, the rms current is 137 mA. Determine the

values of (a) R , (b) C , and (c) L . (d) Is more than one set of values possible? Explain.

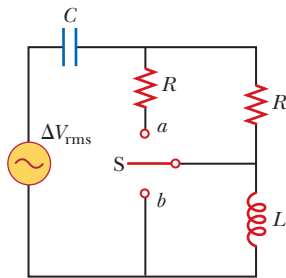


Figure P33.66

67. Marie Cornu, a physicist at the Polytechnic Institute in Paris, invented phasors in about 1880. This problem helps you see their general utility in representing oscillations. Two mechanical vibrations are represented by the expressions

$$y_1 = 12.0 \sin 4.50t$$

and

$$y_2 = 12.0 \sin (4.50t + 70.0^\circ)$$

where y_1 and y_2 are in centimeters and t is in seconds. Find the amplitude and phase constant of the sum of these functions (a) by using a trigonometric identity (as from Appendix B) and (b) by representing the oscillations as phasors. (c) State the result of comparing the answers to parts (a) and (b). (d) Phasors make it equally easy to add traveling waves. Find the amplitude and phase constant of the sum of the three waves represented by

$$y_1 = 12.0 \sin (15.0x - 4.50t + 70.0^\circ)$$

$$y_2 = 15.5 \sin (15.0x - 4.50t - 80.0^\circ)$$

$$y_3 = 17.0 \sin (15.0x - 4.50t + 160^\circ)$$

where x , y_1 , y_2 , and y_3 are in centimeters and t is in seconds.

68. A series RLC circuit has resonance angular frequency 2.00×10^3 rad/s. When it is operating at some input frequency, $X_L = 12.0 \Omega$ and $X_C = 8.00 \Omega$. (a) Is this input frequency higher than, lower than, or the same as the resonance frequency? Explain how you can tell. (b) Explain whether it is possible to determine the values of both L and C . (c) If it is possible, find L and C . If it is not possible, give a compact expression for the condition that L and C must satisfy.

69. **Review.** One insulated conductor from a household extension cord has a mass per length of 19.0 g/m. A section of this conductor is held under tension between two clamps. A subsection is located in a magnetic field of magnitude 15.3 mT directed perpendicular to the length of the cord. When the cord carries an AC current of 9.00 A at a frequency of 60.0 Hz, it vibrates in resonance in its simplest standing-wave vibration mode. (a) Determine the relationship that must be satisfied between the separation d of the clamps and

the tension T in the cord. (b) Determine one possible combination of values for these variables.

70. (a) Sketch a graph of the phase angle for an RLC series circuit as a function of angular frequency from zero to a frequency much higher than the resonance frequency. (b) Identify the value of ϕ at the resonance angular frequency ω_0 . (c) Prove that the slope of the graph of ϕ versus ω at the resonance point is $2Q/\omega_0$.
71. In Figure P33.71, find the rms current delivered by the 45.0 -V (rms) power supply when (a) the frequency is very large and (b) the frequency is very small.

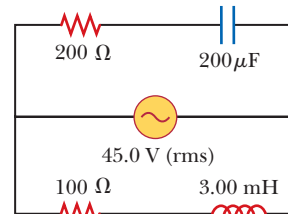


Figure P33.71

72. **Review.** In the circuit shown in Figure P33.72, assume all parameters except C are given. Find (a) the current in the circuit as a function of time and (b) the power delivered to the circuit. (c) Find the current as a function of time after *only* switch 1 is opened. (d) After switch 2 is *also* opened, the current and voltage are in phase. Find the capacitance C . Find (e) the impedance of the circuit when both switches are open, (f) the maximum energy stored in the capacitor during oscillations, and (g) the maximum energy stored in the inductor during oscillations. (h) Now the frequency of the voltage source is doubled. Find the phase difference between the current and the voltage. (i) Find the frequency that makes the inductive reactance one-half the capacitive reactance.

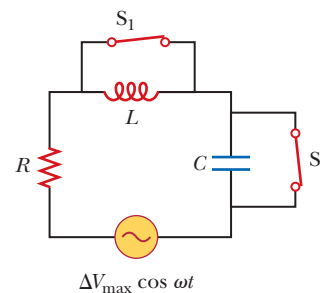


Figure P33.72

73. A series RLC circuit contains the following components: $R = 150 \Omega$, $L = 0.250$ H, $C = 2.00 \mu\text{F}$, and a source with $\Delta V_{\text{max}} = 210$ V operating at 50.0 Hz. Our goal is to find the phase angle, the power factor, and the power input for this circuit. (a) Find the inductive reactance in the circuit. (b) Find the capacitive reactance in the circuit. (c) Find the impedance in the circuit. (d) Calculate the maximum current in the circuit. (e) Determine the phase angle between the cur-

rent and source voltage. (f) Find the power factor for the circuit. (g) Find the power input to the circuit.

74. A series RLC circuit is operating at 2.00×10^3 Hz. At this frequency, $X_L = X_C = 1\ 884\ \Omega$. The resistance of the circuit is $40.0\ \Omega$. (a) Prepare a table showing the values of X_L , X_C , and Z for $f = 300, 600, 800, 1.00 \times 10^3, 1.50 \times 10^3, 2.00 \times 10^3, 3.00 \times 10^3, 4.00 \times 10^3, 6.00 \times 10^3$, and 1.00×10^4 Hz. (b) Plot on the same set of axes X_L , X_C , and Z as a function of $\ln f$.

75. A series RLC circuit consists of an $8.00\text{-}\Omega$ resistor, a $5.00\text{-}\mu\text{F}$ capacitor, and a 50.0-mH inductor. A variable-frequency source applies an emf of $400\ \text{V}$ (rms) across the combination. Assuming the frequency is equal to one-half the resonance frequency, determine the power delivered to the circuit.

76. A series RLC circuit in which $R = 1.00\ \Omega$, $L = 1.00\ \text{mH}$, and $C = 1.00\ \text{nF}$ is connected to an AC source delivering $1.00\ \text{V}$ (rms). (a) Make a precise graph of the power delivered to the circuit as a function of the frequency and (b) verify that the full width of the resonance peak at half-maximum is $R/2\pi L$.

Challenge Problems

77. The resistor in Figure P33.77 represents the midrange speaker in a three-speaker system. Assume its resistance to be constant at $8.00\ \Omega$. The source represents an audio amplifier producing signals of uniform amplitude $\Delta V_{\text{max}} = 10.0\ \text{V}$ at all audio frequencies. The inductor and capacitor are to function as a band-pass filter with $\Delta V_{\text{out}}/\Delta V_{\text{in}} = \frac{1}{2}$ at $200\ \text{Hz}$ and at $4.00 \times 10^3\ \text{Hz}$. Determine the required values of (a) L and (b) C . Find (c) the maximum value of the ratio $\Delta V_{\text{out}}/\Delta V_{\text{in}}$; (d) the frequency f_0 at which the ratio has its maximum value; (e) the phase shift between Δv_{in} and Δv_{out} at $200\ \text{Hz}$, at f_0 , and at $4.00 \times 10^3\ \text{Hz}$; and (f) the average power transferred to the speaker at $200\ \text{Hz}$, at f_0 , and at

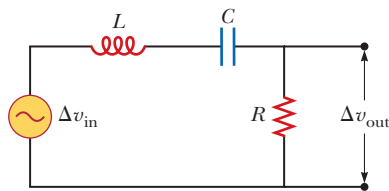


Figure P33.77

4.00×10^3 Hz. (g) Treating the filter as a resonant circuit, find its quality factor.

78. An $80.0\text{-}\Omega$ resistor and a 200-mH inductor are connected in *parallel* across a 100-V (rms), 60.0-Hz source. (a) What is the rms current in the resistor? (b) By what angle does the total current lead or lag behind the voltage?
79. A voltage $\Delta v = 100 \sin \omega t$, where Δv is in volts and t is in seconds, is applied across a series combination of a 2.00-H inductor, a $10.0\text{-}\mu\text{F}$ capacitor, and a $10.0\text{-}\Omega$ resistor. (a) Determine the angular frequency ω_0 at which the power delivered to the resistor is a maximum. (b) Calculate the average power delivered at that frequency. (c) Determine the two angular frequencies ω_1 and ω_2 at which the power is one-half the maximum value. *Note:* The Q of the circuit is $\omega_0/(\omega_2 - \omega_1)$.
80. Figure P33.80a shows a parallel RLC circuit. The instantaneous voltages (and rms voltages) across each of the three circuit elements are the same, and each is in phase with the current in the resistor. The currents in C and L lead or lag the current in the resistor as shown in the current phasor diagram, Figure P33.80b. (a) Show that the rms current delivered by the source is

$$I_{\text{rms}} = \Delta V_{\text{rms}} \left[\frac{1}{R^2} + \left(\omega C - \frac{1}{\omega L} \right)^2 \right]^{1/2}$$

- (b) Show that the phase angle ϕ between ΔV_{rms} and I_{rms} is given by

$$\tan \phi = R \left(\frac{1}{X_C} - \frac{1}{X_L} \right)$$

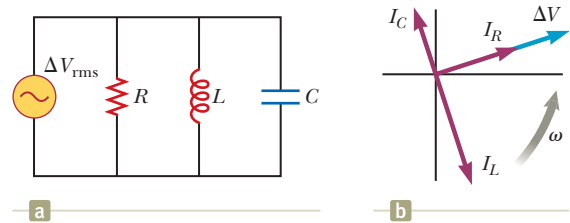


Figure P33.80

81. An AC source with $\Delta V_{\text{rms}} = 120\ \text{V}$ is connected between points a and d in Figure P33.24. At what frequency will it deliver a power of $250\ \text{W}$? Explain your answer.

Electromagnetic Waves

- 34.1 Displacement Current and the General Form of Ampère's Law
- 34.2 Maxwell's Equations and Hertz's Discoveries
- 34.3 Plane Electromagnetic Waves
- 34.4 Energy Carried by Electromagnetic Waves
- 34.5 Momentum and Radiation Pressure
- 34.6 Production of Electromagnetic Waves by an Antenna
- 34.7 The Spectrum of Electromagnetic Waves



This image of the Crab Nebula taken with visible light shows a variety of colors, with each color representing a different wavelength of visible light. (NASA, ESA, J. Hester, A. Loll (ASU))

The waves described in Chapters 16, 17, and 18 are mechanical waves. By definition, the propagation of mechanical disturbances—such as sound waves, water waves, and waves on a string—requires the presence of a medium. This chapter is concerned with the properties of electromagnetic waves, which (unlike mechanical waves) can propagate through empty space.

We begin by considering Maxwell's contributions in modifying Ampère's law, which we studied in Chapter 30. We then discuss Maxwell's equations, which form the theoretical basis of all electromagnetic phenomena. These equations predict the existence of electromagnetic waves that propagate through space at the speed of light c according to the traveling wave analysis model. Heinrich Hertz confirmed Maxwell's prediction when he generated and detected electromagnetic waves in 1887. That discovery has led to many practical communication systems, including radio, television, cell phone systems, wireless Internet connectivity, and optoelectronics.

Next, we learn how electromagnetic waves are generated by oscillating electric charges. The waves radiated from the oscillating charges can be detected at great distances. Furthermore, because electromagnetic waves carry energy (T_{ER} in Eq. 8.2) and momentum, they can exert pressure on a surface. The chapter concludes with a description of the various frequency ranges in the electromagnetic spectrum.

34.1 Displacement Current and the General Form of Ampère's Law

In Chapter 30, we discussed using Ampère's law (Eq. 30.13) to analyze the magnetic fields created by currents:

$$\oint \vec{\mathbf{B}} \cdot d\vec{\mathbf{s}} = \mu_0 I$$

In this equation, the line integral is over any closed path through which conduction current passes, where conduction current is defined by the expression $I = dq/dt$. (In this section, we use the term *conduction current* to refer to the current carried by charge carriers in the wire to distinguish it from a new type of current we shall introduce shortly.) We now show that Ampère's law in this form is valid only if any electric fields present are constant in time. James Clerk Maxwell recognized this limitation and modified Ampère's law to include time-varying electric fields.

Consider a capacitor being charged as illustrated in Figure 34.1. When a conduction current is present, the charge on the positive plate changes, but no conduction current exists in the gap between the plates because there are no charge carriers in the gap. Now consider the two surfaces S_1 and S_2 in Figure 34.1, bounded by the same path P . Ampère's law states that $\oint \vec{\mathbf{B}} \cdot d\vec{\mathbf{s}}$ around this path must equal $\mu_0 I$, where I is the total current through *any* surface bounded by the path P .

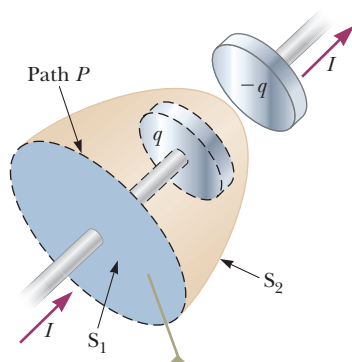
When the path P is considered to be the boundary of S_1 , $\oint \vec{\mathbf{B}} \cdot d\vec{\mathbf{s}} = \mu_0 I$ because the conduction current I passes through S_1 . When the path is considered to be the boundary of S_2 , however, $\oint \vec{\mathbf{B}} \cdot d\vec{\mathbf{s}} = 0$ because no conduction current passes through S_2 . Therefore, we have a contradictory situation that arises from the discontinuity of the current! Maxwell solved this problem by postulating an additional term on the right side of Ampère's law, which includes a factor called the **displacement current** I_d defined as¹

$$I_d \equiv \epsilon_0 \frac{d\Phi_E}{dt} \quad (34.1)$$



James Clerk Maxwell
Scottish Theoretical Physicist
(1831–1879)

Maxwell developed the electromagnetic theory of light and the kinetic theory of gases, and explained the nature of Saturn's rings and color vision. Maxwell's successful interpretation of the electromagnetic field resulted in the field equations that bear his name. Formidable mathematical ability combined with great insight enabled him to lead the way in the study of electromagnetism and kinetic theory. He died of cancer before he was 50.



The conduction current I in the wire passes only through S_1 , which leads to a contradiction in Ampère's law that is resolved only if one postulates a displacement current through S_2 .

Figure 34.1 Two surfaces S_1 and S_2 near the plate of a capacitor are bounded by the same path P .

◀ Displacement current

¹*Displacement* in this context does not have the meaning it does in Chapter 2. Despite the inaccurate implications, the word is historically entrenched in the language of physics, so we continue to use it.

where ϵ_0 is the permittivity of free space (see Section 23.3) and $\Phi_E \equiv \int \vec{\mathbf{E}} \cdot d\vec{\mathbf{A}}$ is the electric flux (see Eq. 24.3) through the surface bounded by the path of integration.

As the capacitor is being charged (or discharged), the changing electric field between the plates may be considered equivalent to a current that acts as a continuation of the conduction current in the wire. When the expression for the displacement current given by Equation 34.1 is added to the conduction current on the right side of Ampère's law, the difficulty represented in Figure 34.1 is resolved. No matter which surface bounded by the path P is chosen, either a conduction current or a displacement current passes through it. With this new term I_d , we can express the general form of Ampère's law (sometimes called the **Ampère–Maxwell law**) as

Ampère–Maxwell law ▶

$$\oint \vec{\mathbf{B}} \cdot d\vec{\mathbf{s}} = \mu_0(I + I_d) = \mu_0 I + \mu_0 \epsilon_0 \frac{d\Phi_E}{dt} \quad (34.2)$$

The electric field lines between the plates create an electric flux through surface S .

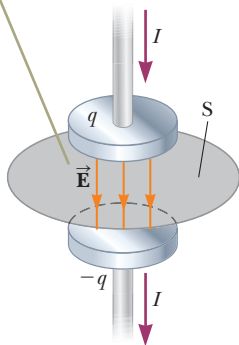


Figure 34.2 When a conduction current exists in the wires, a changing electric field $\vec{\mathbf{E}}$ exists between the plates of the capacitor.

We can understand the meaning of this expression by referring to Figure 34.2. The electric flux through surface S is $\Phi_E = \int \vec{\mathbf{E}} \cdot d\vec{\mathbf{A}} = EA$, where A is the area of the capacitor plates and E is the magnitude of the uniform electric field between the plates. If q is the charge on the plates at any instant, then $E = q/(\epsilon_0 A)$ (see Section 26.2). Therefore, the electric flux through S is

$$\Phi_E = EA = \frac{q}{\epsilon_0}$$

Hence, the displacement current through S is

$$I_d = \epsilon_0 \frac{d\Phi_E}{dt} = \frac{dq}{dt} \quad (34.3)$$

That is, the displacement current I_d through S is precisely equal to the conduction current I in the wires connected to the capacitor!

By considering surface S , we can identify the displacement current as the source of the magnetic field on the surface boundary. The displacement current has its physical origin in the time-varying electric field. The central point of this formalism is that magnetic fields are produced *both* by conduction currents *and* by time-varying electric fields. This result was a remarkable example of theoretical work by Maxwell, and it contributed to major advances in the understanding of electromagnetism.

- Quick Quiz 34.1** In an RC circuit, the capacitor begins to discharge. (i) During the discharge, in the region of space between the plates of the capacitor, is there (a) conduction current but no displacement current, (b) displacement current but no conduction current, (c) both conduction and displacement current, or (d) no current of any type? (ii) In the same region of space, is there (a) an electric field but no magnetic field, (b) a magnetic field but no electric field, (c) both electric and magnetic fields, or (d) no fields of any type?

Example 34.1 Displacement Current in a Capacitor

A sinusoidally varying voltage is applied across a capacitor as shown in Figure 34.3. The capacitance is $C = 8.00 \mu\text{F}$, the frequency of the applied voltage is $f = 3.00 \text{ kHz}$, and the voltage amplitude is $\Delta V_{\text{max}} = 30.0 \text{ V}$. Find the displacement current in the capacitor.

SOLUTION

Conceptualize Figure 34.3 represents the circuit diagram for this situation. Figure 34.2 shows a close-up of the capacitor and the electric field between the plates.

Categorize We determine results using equations discussed in this section, so we categorize this example as a substitution problem.

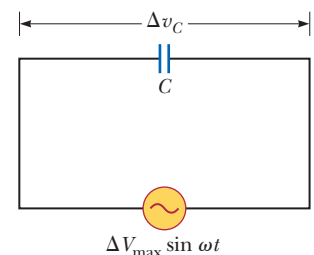


Figure 34.3 (Example 34.1)

▶ 34.1 continued

Evaluate the angular frequency of the source from Equation 15.12:

$$\omega = 2\pi f = 2\pi(3.00 \times 10^3 \text{ Hz}) = 1.88 \times 10^4 \text{ s}^{-1}$$

Use Equation 33.20 to express the potential difference in volts across the capacitor as a function of time in seconds:

$$\Delta v_C = \Delta V_{\max} \sin \omega t = 30.0 \sin (1.88 \times 10^4 t)$$

Use Equation 34.3 to find the displacement current in amperes as a function of time. Note that the charge on the capacitor is $q = C \Delta v_C$:

$$\begin{aligned} i_d &= \frac{dq}{dt} = \frac{d}{dt} (C \Delta v_C) = C \frac{d}{dt} (\Delta V_{\max} \sin \omega t) \\ &= \omega C \Delta V_{\max} \cos \omega t \end{aligned}$$

Substitute numerical values:

$$\begin{aligned} i_d &= (1.88 \times 10^4 \text{ s}^{-1})(8.00 \times 10^{-6} \text{ C})(30.0 \text{ V}) \cos (1.88 \times 10^4 t) \\ &= 4.51 \cos (1.88 \times 10^4 t) \end{aligned}$$

34.2 Maxwell's Equations and Hertz's Discoveries

We now present four equations that are regarded as the basis of all electrical and magnetic phenomena. These equations, developed by Maxwell, are as fundamental to electromagnetic phenomena as Newton's laws are to mechanical phenomena. In fact, the theory that Maxwell developed was more far-reaching than even he imagined because it turned out to be in agreement with the special theory of relativity, as Einstein showed in 1905.

Maxwell's equations represent the laws of electricity and magnetism that we have already discussed, but they have additional important consequences. For simplicity, we present **Maxwell's equations** as applied to free space, that is, in the absence of any dielectric or magnetic material. The four equations are

$$\oint \vec{\mathbf{E}} \cdot d\vec{\mathbf{A}} = \frac{q}{\epsilon_0} \quad (34.4) \quad \leftarrow \text{Gauss's law}$$

$$\oint \vec{\mathbf{B}} \cdot d\vec{\mathbf{A}} = 0 \quad (34.5) \quad \leftarrow \text{Gauss's law in magnetism}$$

$$\oint \vec{\mathbf{E}} \cdot d\vec{\mathbf{s}} = -\frac{d\Phi_B}{dt} \quad (34.6) \quad \leftarrow \text{Faraday's law}$$

$$\oint \vec{\mathbf{B}} \cdot d\vec{\mathbf{s}} = \mu_0 I + \epsilon_0 \mu_0 \frac{d\Phi_E}{dt} \quad (34.7) \quad \leftarrow \text{Ampère–Maxwell law}$$

Equation 34.4 is Gauss's law: the total electric flux through any closed surface equals the net charge inside that surface divided by ϵ_0 . This law relates an electric field to the charge distribution that creates it.

Equation 34.5 is Gauss's law in magnetism, and it states that the net magnetic flux through a closed surface is zero. That is, the number of magnetic field lines that enter a closed volume must equal the number that leave that volume, which implies that magnetic field lines cannot begin or end at any point. If they did, it would mean that isolated magnetic monopoles existed at those points. That isolated magnetic monopoles have not been observed in nature can be taken as a confirmation of Equation 34.5.

Equation 34.6 is Faraday's law of induction, which describes the creation of an electric field by a changing magnetic flux. This law states that the emf, which is the

line integral of the electric field around any closed path, equals the rate of change of magnetic flux through any surface bounded by that path. One consequence of Faraday's law is the current induced in a conducting loop placed in a time-varying magnetic field.

Equation 34.7 is the Ampère–Maxwell law, discussed in Section 34.1, and it describes the creation of a magnetic field by a changing electric field and by electric current: the line integral of the magnetic field around any closed path is the sum of μ_0 multiplied by the net current through that path and $\epsilon_0\mu_0$ multiplied by the rate of change of electric flux through any surface bounded by that path.

Once the electric and magnetic fields are known at some point in space, the force acting on a particle of charge q can be calculated from the electric and magnetic versions of the particle in a field model:

Lorentz force law ►

$$\vec{\mathbf{F}} = q\vec{\mathbf{E}} + q\vec{\mathbf{v}} \times \vec{\mathbf{B}} \quad (34.8)$$

This relationship is called the **Lorentz force law**. (We saw this relationship earlier as Eq. 29.6.) Maxwell's equations, together with this force law, completely describe all classical electromagnetic interactions in a vacuum.

Notice the symmetry of Maxwell's equations. Equations 34.4 and 34.5 are symmetric, apart from the absence of the term for magnetic monopoles in Equation 34.5. Furthermore, Equations 34.6 and 34.7 are symmetric in that the line integrals of $\vec{\mathbf{E}}$ and $\vec{\mathbf{B}}$ around a closed path are related to the rate of change of magnetic flux and electric flux, respectively. Maxwell's equations are of fundamental importance not only to electromagnetism, but to all science. Hertz once wrote, "One cannot escape the feeling that these mathematical formulas have an independent existence and an intelligence of their own, that they are wiser than we are, wiser even than their discoverers, that we get more out of them than we put into them."

In the next section, we show that Equations 34.6 and 34.7 can be combined to obtain a wave equation for both the electric field and the magnetic field. In empty space, where $q = 0$ and $I = 0$, the solution to these two equations shows that the speed at which electromagnetic waves travel equals the measured speed of light. This result led Maxwell to predict that light waves are a form of electromagnetic radiation.

Hertz performed experiments that verified Maxwell's prediction. The experimental apparatus Hertz used to generate and detect electromagnetic waves is shown schematically in Figure 34.4. An induction coil is connected to a transmitter made up of two spherical electrodes separated by a narrow gap. The coil provides short voltage surges to the electrodes, making one positive and the other negative. A spark is generated between the spheres when the electric field near either electrode surpasses the dielectric strength for air (3×10^6 V/m; see Table 26.1). Free electrons in a strong electric field are accelerated and gain enough energy to ionize any molecules they strike. This ionization provides more electrons, which can accelerate and cause further ionizations. As the air in the gap is ionized, it becomes a much better conductor and the discharge between the electrodes exhibits an oscillatory behavior at a very high frequency. From an electric-circuit viewpoint, this experimental apparatus is equivalent to an LC circuit in which the inductance is that of the coil and the capacitance is due to the spherical electrodes.

Because L and C are small in Hertz's apparatus, the frequency of oscillation is high, on the order of 100 MHz. (Recall from Eq. 32.22 that $\omega = 1/\sqrt{LC}$ for an LC circuit.) Electromagnetic waves are radiated at this frequency as a result of the oscillation of free charges in the transmitter circuit. Hertz was able to detect these waves using a single loop of wire with its own spark gap (the receiver). Such a receiver loop, placed several meters from the transmitter, has its own effective inductance, capacitance, and natural frequency of oscillation. In Hertz's experiment, sparks were induced across the gap of the receiving electrodes when the receiver's frequency was adjusted to match that of the transmitter. In this way,

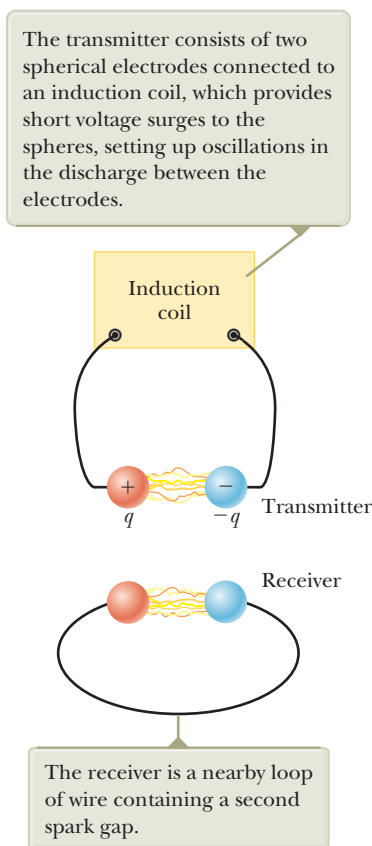


Figure 34.4 Schematic diagram of Hertz's apparatus for generating and detecting electromagnetic waves.

Hertz demonstrated that the oscillating current induced in the receiver was produced by electromagnetic waves radiated by the transmitter. His experiment is analogous to the mechanical phenomenon in which a tuning fork responds to acoustic vibrations from an identical tuning fork that is oscillating nearby.

In addition, Hertz showed in a series of experiments that the radiation generated by his spark-gap device exhibited the wave properties of interference, diffraction, reflection, refraction, and polarization, which are all properties exhibited by light as we shall see in Part 5. Therefore, it became evident that the radio-frequency waves Hertz was generating had properties similar to those of light waves and that they differed only in frequency and wavelength. Perhaps his most convincing experiment was the measurement of the speed of this radiation. Waves of known frequency were reflected from a metal sheet and created a standing-wave interference pattern whose nodal points could be detected. The measured distance between the nodal points enabled determination of the wavelength λ . Using the relationship $v = \lambda f$ (Eq. 16.12) from the traveling wave model, Hertz found that v was close to 3×10^8 m/s, the known speed c of visible light.

34.3 Plane Electromagnetic Waves

The properties of electromagnetic waves can be deduced from Maxwell's equations. One approach to deriving these properties is to solve the second-order differential equation obtained from Maxwell's third and fourth equations. A rigorous mathematical treatment of that sort is beyond the scope of this text. To circumvent this problem, let's assume the vectors for the electric field and magnetic field in an electromagnetic wave have a specific space-time behavior that is simple but consistent with Maxwell equations.

To understand the prediction of electromagnetic waves more fully, let's focus our attention on an electromagnetic wave that travels in the x direction (the *direction of propagation*). For this wave, the electric field \vec{E} is in the y direction and the magnetic field \vec{B} is in the z direction as shown in Figure 34.5. Such waves, in which the electric and magnetic fields are restricted to being parallel to a pair of perpendicular axes, are said to be **linearly polarized waves**. Furthermore, let's assume the field magnitudes E and B depend on x and t only, not on the y or z coordinate.

Let's also imagine that the source of the electromagnetic waves is such that a wave radiated from *any* position in the yz plane (not only from the origin as might be suggested by Fig. 34.5) propagates in the x direction and all such waves are emitted in phase. If we define a **ray** as the line along which the wave travels, all rays for these waves are parallel. This entire collection of waves is often called a **plane wave**. A surface connecting points of equal phase on all waves is a geometric plane called a **wave front**, introduced in Chapter 17. In comparison, a point source of radiation sends waves out radially in all directions. A surface connecting points of equal phase for this situation is a sphere, so this wave is called a **spherical wave**.

To generate the prediction of plane electromagnetic waves, we start with Faraday's law, Equation 34.6:

$$\oint \vec{E} \cdot d\vec{s} = -\frac{d\Phi_B}{dt}$$

To apply this equation to the wave in Figure 34.5, consider a rectangle of width dx and height ℓ lying in the xy plane as shown in Figure 34.6 (page 1036). Let's first evaluate the line integral of $\vec{E} \cdot d\vec{s}$ around this rectangle in the counter-clockwise direction at an instant of time when the wave is passing through the rectangle. The contributions from the top and bottom of the rectangle are zero because \vec{E} is perpendicular to $d\vec{s}$ for these paths. We can express the electric field on the right side of the rectangle as

$$E(x + dx) \approx E(x) + \left. \frac{dE}{dx} \right|_{t \text{ constant}} dx = E(x) + \frac{\partial E}{\partial x} dx$$



Heinrich Rudolf Hertz
German Physicist (1857–1894)

Hertz made his most important discovery of electromagnetic waves in 1887. After finding that the speed of an electromagnetic wave was the same as that of light, Hertz showed that electromagnetic waves, like light waves, could be reflected, refracted, and diffracted. The hertz, equal to one complete vibration or cycle per second, is named after him.

Pitfall Prevention 34.1

What Is "a" Wave? What do we mean by a *single wave*? The word *wave* represents both the emission from a *single point* ("wave radiated from *any* position in the yz plane" in the text) and the collection of waves from *all points* on the source ("**plane wave**" in the text). You should be able to use this term in both ways and understand its meaning from the context.

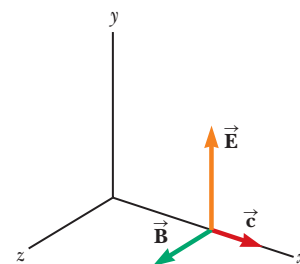


Figure 34.5 Electric and magnetic fields of an electromagnetic wave traveling at velocity \vec{c} in the positive x direction. The field vectors are shown at one instant of time and at one position in space. These fields depend on x and t .

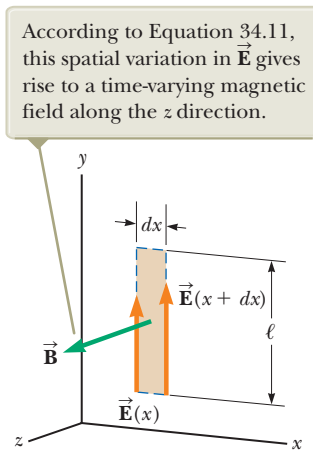


Figure 34.6 At an instant when a plane wave moving in the positive x direction passes through a rectangular path of width dx lying in the xy plane, the electric field in the y direction varies from $\vec{E}(x)$ to $\vec{E}(x + dx)$.

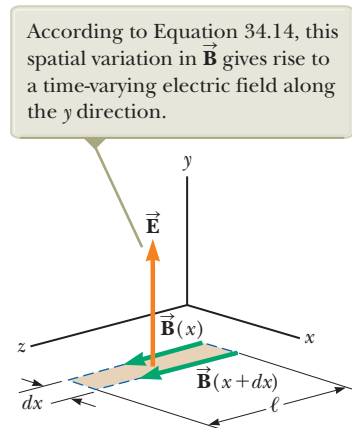


Figure 34.7 At an instant when a plane wave passes through a rectangular path of width dx lying in the xz plane, the magnetic field in the z direction varies from $\vec{B}(x)$ to $\vec{B}(x + dx)$.

where $E(x)$ is the field on the left side of the rectangle at this instant.² Therefore, the line integral over this rectangle is approximately

$$\oint \vec{E} \cdot d\vec{s} = [E(x + dx)]\ell - [E(x)]\ell \approx \ell \left(\frac{\partial E}{\partial x} \right) dx \quad (34.9)$$

Because the magnetic field is in the z direction, the magnetic flux through the rectangle of area ℓdx is approximately $\Phi_B = B\ell dx$ (assuming dx is very small compared with the wavelength of the wave). Taking the time derivative of the magnetic flux gives

$$\frac{d\Phi_B}{dt} = \ell dx \left. \frac{dB}{dt} \right|_{x \text{ constant}} = \ell dx \frac{\partial B}{\partial t} \quad (34.10)$$

Substituting Equations 34.9 and 34.10 into Equation 34.6 gives

$$\begin{aligned} \ell \left(\frac{\partial E}{\partial x} \right) dx &= -\ell dx \frac{\partial B}{\partial t} \\ \frac{\partial E}{\partial x} &= -\frac{\partial B}{\partial t} \end{aligned} \quad (34.11)$$

In a similar manner, we can derive a second equation by starting with Maxwell's fourth equation in empty space (Eq. 34.7). In this case, the line integral of $\vec{B} \cdot d\vec{s}$ is evaluated around a rectangle lying in the xz plane and having width dx and length ℓ as in Figure 34.7. Noting that the magnitude of the magnetic field changes from $B(x)$ to $B(x + dx)$ over the width dx and that the direction for taking the line integral is counterclockwise when viewed from above in Figure 34.7, the line integral over this rectangle is found to be approximately

$$\oint \vec{B} \cdot d\vec{s} = [B(x)]\ell - [B(x + dx)]\ell \approx -\ell \left(\frac{\partial B}{\partial x} \right) dx \quad (34.12)$$

²Because dE/dx in this equation is expressed as the change in E with x at a given instant t , dE/dx is equivalent to the partial derivative $\partial E/\partial x$. Likewise, dB/dt means the change in B with time at a particular position x ; therefore, in Equation 34.10, we can replace dB/dt with $\partial B/\partial t$.

The electric flux through the rectangle is $\Phi_E = E\ell dx$, which, when differentiated with respect to time, gives

$$\frac{\partial \Phi_E}{\partial t} = \ell dx \frac{\partial E}{\partial t} \quad (34.13)$$

Substituting Equations 34.12 and 34.13 into Equation 34.7 gives

$$-\ell \left(\frac{\partial B}{\partial x} \right) dx = \mu_0 \epsilon_0 \ell dx \left(\frac{\partial E}{\partial t} \right)$$

$$\frac{\partial B}{\partial x} = -\mu_0 \epsilon_0 \frac{\partial E}{\partial t} \quad (34.14)$$

Taking the derivative of Equation 34.11 with respect to x and combining the result with Equation 34.14 gives

$$\frac{\partial^2 E}{\partial x^2} = -\frac{\partial}{\partial x} \left(\frac{\partial B}{\partial t} \right) = -\frac{\partial}{\partial t} \left(\frac{\partial B}{\partial x} \right) = -\frac{\partial}{\partial t} \left(-\mu_0 \epsilon_0 \frac{\partial E}{\partial t} \right)$$

$$\frac{\partial^2 E}{\partial x^2} = \mu_0 \epsilon_0 \frac{\partial^2 E}{\partial t^2} \quad (34.15)$$

In the same manner, taking the derivative of Equation 34.14 with respect to x and combining it with Equation 34.11 gives

$$\frac{\partial^2 B}{\partial x^2} = \mu_0 \epsilon_0 \frac{\partial^2 B}{\partial t^2} \quad (34.16)$$

Equations 34.15 and 34.16 both have the form of the linear wave equation³ with the wave speed v replaced by c , where

$$c = \frac{1}{\sqrt{\mu_0 \epsilon_0}} \quad (34.17)$$

◀ Speed of electromagnetic waves

Let's evaluate this speed numerically:

$$c = \frac{1}{\sqrt{(4\pi \times 10^{-7} \text{ T} \cdot \text{m/A})(8.854 19 \times 10^{-12} \text{ C}^2/\text{N} \cdot \text{m}^2)}}$$

$$= 2.997 92 \times 10^8 \text{ m/s}$$

Because this speed is precisely the same as the speed of light in empty space, we are led to believe (correctly) that light is an electromagnetic wave.

The simplest solution to Equations 34.15 and 34.16 is a sinusoidal wave for which the field magnitudes E and B vary with x and t according to the expressions

$$E = E_{\max} \cos(kx - \omega t) \quad (34.18)$$

$$B = B_{\max} \cos(kx - \omega t) \quad (34.19)$$

◀ Sinusoidal electric and magnetic fields

where E_{\max} and B_{\max} are the maximum values of the fields. The angular wave number is $k = 2\pi/\lambda$, where λ is the wavelength. The angular frequency is $\omega = 2\pi f$, where f is the wave frequency. According to the traveling wave model, the ratio ω/k equals the speed of an electromagnetic wave, c :

$$\frac{\omega}{k} = \frac{2\pi f}{2\pi/\lambda} = \lambda f = c$$

³The linear wave equation is of the form $(\partial^2 y / \partial x^2) = (1/v^2)(\partial^2 y / \partial t^2)$, where v is the speed of the wave and y is the wave function. The linear wave equation was introduced as Equation 16.27, and we suggest you review Section 16.6.

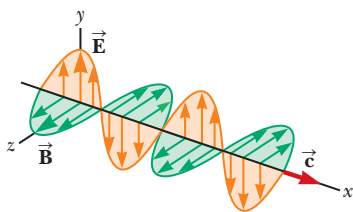


Figure 34.8 A sinusoidal electromagnetic wave moves in the positive x direction with a speed c .

where we have used Equation 16.12, $v = c = \lambda f$, which relates the speed, frequency, and wavelength of a sinusoidal wave. Therefore, for electromagnetic waves, the wavelength and frequency of these waves are related by

$$\lambda = \frac{c}{f} = \frac{3.00 \times 10^8 \text{ m/s}}{f} \quad (34.20)$$

Figure 34.8 is a pictorial representation, at one instant, of a sinusoidal, linearly polarized electromagnetic wave moving in the positive x direction.

We can generate other mathematical representations of the traveling wave model for electromagnetic waves. Taking partial derivatives of Equations 34.18 (with respect to x) and 34.19 (with respect to t) gives

$$\frac{\partial E}{\partial x} = -kE_{\text{max}} \sin(kx - \omega t)$$

$$\frac{\partial B}{\partial t} = \omega B_{\text{max}} \sin(kx - \omega t)$$

Substituting these results into Equation 34.11 shows that, at any instant,

$$kE_{\text{max}} = \omega B_{\text{max}}$$

$$\frac{E_{\text{max}}}{B_{\text{max}}} = \frac{\omega}{k} = c$$

Using these results together with Equations 34.18 and 34.19 gives

$$\frac{E_{\text{max}}}{B_{\text{max}}} = \frac{E}{B} = c \quad (34.21)$$

That is, at every instant, the ratio of the magnitude of the electric field to the magnitude of the magnetic field in an electromagnetic wave equals the speed of light.

Finally, note that electromagnetic waves obey the superposition principle as described in the waves in interference analysis model (which we discussed in Section 18.1 with respect to mechanical waves) because the differential equations involving E and B are linear equations. For example, we can add two waves with the same frequency and polarization simply by adding the magnitudes of the two electric fields algebraically.

Quick Quiz 34.2 What is the phase difference between the sinusoidal oscillations of the electric and magnetic fields in Figure 34.8? (a) 180° (b) 90° (c) 0 (d) impossible to determine

Quick Quiz 34.3 An electromagnetic wave propagates in the negative y direction. The electric field at a point in space is momentarily oriented in the positive x direction. In which direction is the magnetic field at that point momentarily oriented? (a) the negative x direction (b) the positive y direction (c) the positive z direction (d) the negative z direction

Pitfall Prevention 34.2

\vec{E} Stronger Than \vec{B} ? Because the value of c is so large, some students incorrectly interpret Equation 34.21 as meaning that the electric field is much stronger than the magnetic field. Electric and magnetic fields are measured in different units, however, so they cannot be directly compared. In Section 34.4, we find that the electric and magnetic fields contribute equally to the wave's energy.

Example 34.2

An Electromagnetic Wave AM

A sinusoidal electromagnetic wave of frequency 40.0 MHz travels in free space in the x direction as in Figure 34.9.

(A) Determine the wavelength and period of the wave.

▶ 34.2 continued

SOLUTION

Conceptualize Imagine the wave in Figure 34.9 moving to the right along the x axis, with the electric and magnetic fields oscillating in phase.

Categorize We use the mathematical representation of the *traveling wave* model for electromagnetic waves.

Analyze

Use Equation 34.20 to find the wavelength of the wave:

$$\lambda = \frac{c}{f} = \frac{3.00 \times 10^8 \text{ m/s}}{40.0 \times 10^6 \text{ Hz}} = 7.50 \text{ m}$$

Find the period T of the wave as the inverse of the frequency:

$$T = \frac{1}{f} = \frac{1}{40.0 \times 10^6 \text{ Hz}} = 2.50 \times 10^{-8} \text{ s}$$

(B) At some point and at some instant, the electric field has its maximum value of 750 N/C and is directed along the y axis. Calculate the magnitude and direction of the magnetic field at this position and time.

SOLUTION

Use Equation 34.21 to find the magnitude of the magnetic field:

$$B_{\text{max}} = \frac{E_{\text{max}}}{c} = \frac{750 \text{ N/C}}{3.00 \times 10^8 \text{ m/s}} = 2.50 \times 10^{-6} \text{ T}$$

Because \vec{E} and \vec{B} must be perpendicular to each other and perpendicular to the direction of wave propagation (x in this case), we conclude that \vec{B} is in the z direction.

Finalize Notice that the wavelength is several meters. This is relatively long for an electromagnetic wave. As we will see in Section 34.7, this wave belongs to the radio range of frequencies.

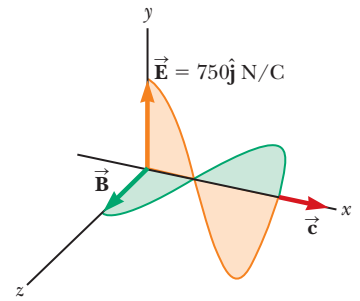


Figure 34.9 (Example 34.2) At some instant, a plane electromagnetic wave moving in the x direction has a maximum electric field of 750 N/C in the positive y direction.

34.4 Energy Carried by Electromagnetic Waves

In our discussion of the nonisolated system model for energy in Section 8.1, we identified electromagnetic radiation as one method of energy transfer across the boundary of a system. The amount of energy transferred by electromagnetic waves is symbolized as T_{ER} in Equation 8.2. The rate of transfer of energy by an electromagnetic wave is described by a vector \vec{S} , called the **Poynting vector**, which is defined by the expression

$$\vec{S} \equiv \frac{1}{\mu_0} \vec{E} \times \vec{B} \quad (34.22)$$

◀ Poynting vector

The magnitude of the Poynting vector represents the rate at which energy passes through a unit surface area perpendicular to the direction of wave propagation. Therefore, the magnitude of \vec{S} represents *power per unit area*. The direction of the vector is along the direction of wave propagation (Fig. 34.10, page 1040). The SI units of \vec{S} are $\text{J/s} \cdot \text{m}^2 = \text{W/m}^2$.

As an example, let's evaluate the magnitude of \vec{S} for a plane electromagnetic wave where $|\vec{E} \times \vec{B}| = EB$. In this case,

$$S = \frac{EB}{\mu_0} \quad (34.23)$$

Pitfall Prevention 34.3

An Instantaneous Value The Poynting vector given by Equation 34.22 is time dependent. Its magnitude varies in time, reaching a maximum value at the same instant the magnitudes of \vec{E} and \vec{B} do. The *average* rate of energy transfer is given by Equation 34.24 on the next page.

Pitfall Prevention 34.4

Irradiance In this discussion, intensity is defined in the same way as in Chapter 17 (as power per unit area). In the optics industry, however, power per unit area is called the *irradiance*. Radiant intensity is defined as the power in watts per solid angle (measured in steradians).

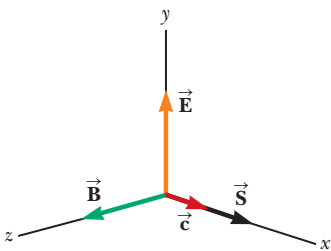
Wave intensity ▶

Figure 34.10 The Poynting vector \vec{S} for a plane electromagnetic wave is along the direction of wave propagation.

Total instantaneous energy density of an electromagnetic wave ▶**Average energy density of an electromagnetic wave** ▶

Because $B = E/c$, we can also express this result as

$$S = \frac{E^2}{\mu_0 c} = \frac{cB^2}{\mu_0}$$

These equations for S apply at any instant of time and represent the *instantaneous* rate at which energy is passing through a unit area in terms of the instantaneous values of E and B .

What is of greater interest for a sinusoidal plane electromagnetic wave is the time average of S over one or more cycles, which is called the *wave intensity* I . (We discussed the intensity of sound waves in Chapter 17.) When this average is taken, we obtain an expression involving the time average of $\cos^2(kx - \omega t)$, which equals $\frac{1}{2}$. Hence, the average value of S (in other words, the intensity of the wave) is

$$I = S_{\text{avg}} = \frac{E_{\text{max}} B_{\text{max}}}{2\mu_0} = \frac{E_{\text{max}}^2}{2\mu_0 c} = \frac{cB_{\text{max}}^2}{2\mu_0} \quad (34.24)$$

Recall that the energy per unit volume associated with an electric field, which is the instantaneous energy density u_E , is given by Equation 26.13:

$$u_E = \frac{1}{2} \epsilon_0 E^2$$

Also recall that the instantaneous energy density u_B associated with a magnetic field is given by Equation 32.14:

$$u_B = \frac{B^2}{2\mu_0}$$

Because E and B vary with time for an electromagnetic wave, the energy densities also vary with time. Using the relationships $B = E/c$ and $c = 1/\sqrt{\mu_0 \epsilon_0}$, the expression for u_B becomes

$$u_B = \frac{(E/c)^2}{2\mu_0} = \frac{\mu_0 \epsilon_0}{2\mu_0} E^2 = \frac{1}{2} \epsilon_0 E^2$$

Comparing this result with the expression for u_E , we see that

$$u_B = u_E = \frac{1}{2} \epsilon_0 E^2 = \frac{B^2}{2\mu_0}$$

That is, the instantaneous energy density associated with the magnetic field of an electromagnetic wave equals the instantaneous energy density associated with the electric field. Hence, in a given volume, the energy is equally shared by the two fields.

The **total instantaneous energy density** u is equal to the sum of the energy densities associated with the electric and magnetic fields:

$$u = u_E + u_B = \epsilon_0 E^2 = \frac{B^2}{\mu_0}$$

When this total instantaneous energy density is averaged over one or more cycles of an electromagnetic wave, we again obtain a factor of $\frac{1}{2}$. Hence, for any electromagnetic wave, the total average energy per unit volume is

$$u_{\text{avg}} = \epsilon_0 (E^2)_{\text{avg}} = \frac{1}{2} \epsilon_0 E_{\text{max}}^2 = \frac{B_{\text{max}}^2}{2\mu_0} \quad (34.25)$$

Comparing this result with Equation 34.24 for the average value of S , we see that

$$I = S_{\text{avg}} = c u_{\text{avg}} \quad (34.26)$$

In other words, the intensity of an electromagnetic wave equals the average energy density multiplied by the speed of light.

The Sun delivers about 10^3 W/m^2 of energy to the Earth's surface via electromagnetic radiation. Let's calculate the total power that is incident on the roof of a home. The roof's dimensions are $8.00 \text{ m} \times 20.0 \text{ m}$. We assume the average magnitude of the Poynting vector for solar radiation at the surface of the Earth is $S_{\text{avg}} = 1\,000 \text{ W/m}^2$. This average value represents the power per unit area, or the light intensity. Assuming the radiation is incident normal to the roof, we obtain

$$P_{\text{avg}} = S_{\text{avg}}A = (1\,000 \text{ W/m}^2)(8.00 \text{ m} \times 20.0 \text{ m}) = 1.60 \times 10^5 \text{ W}$$

This power is large compared with the power requirements of a typical home. If this power could be absorbed and made available to electrical devices, it would provide more than enough energy for the average home. Solar energy is not easily harnessed, however, and the prospects for large-scale conversion are not as bright as may appear from this calculation. For example, the efficiency of conversion from solar energy is typically 12–18% for photovoltaic cells, reducing the available power by an order of magnitude. Other considerations reduce the power even further. Depending on location, the radiation is most likely not incident normal to the roof and, even if it is, this situation exists for only a short time near the middle of the day. No energy is available for about half of each day during the nighttime hours, and cloudy days further reduce the available energy. Finally, while energy is arriving at a large rate during the middle of the day, some of it must be stored for later use, requiring batteries or other storage devices. All in all, complete solar operation of homes is not currently cost effective for most homes.

Example 34.3 Fields on the Page

Estimate the maximum magnitudes of the electric and magnetic fields of the light that is incident on this page because of the visible light coming from your desk lamp. Treat the lightbulb as a point source of electromagnetic radiation that is 5% efficient at transforming energy coming in by electrical transmission to energy leaving by visible light.

SOLUTION

Conceptualize The filament in your lightbulb emits electromagnetic radiation. The brighter the light, the larger the magnitudes of the electric and magnetic fields.

Categorize Because the lightbulb is to be treated as a point source, it emits equally in all directions, so the outgoing electromagnetic radiation can be modeled as a spherical wave.

Analyze Recall from Equation 17.13 that the wave intensity I a distance r from a point source is $I = P_{\text{avg}}/4\pi r^2$, where P_{avg} is the average power output of the source and $4\pi r^2$ is the area of a sphere of radius r centered on the source.

Set this expression for I equal to the intensity of an electromagnetic wave given by Equation 34.24:

$$I = \frac{P_{\text{avg}}}{4\pi r^2} = \frac{E_{\text{max}}^2}{2\mu_0 c}$$

Solve for the electric field magnitude:

$$E_{\text{max}} = \sqrt{\frac{\mu_0 c P_{\text{avg}}}{2\pi r^2}}$$

Let's make some assumptions about numbers to enter in this equation. The visible light output of a 60-W lightbulb operating at 5% efficiency is approximately 3.0 W by visible light. (The remaining energy transfers out of the lightbulb by thermal conduction and invisible radiation.) A reasonable distance from the lightbulb to the page might be 0.30 m.

Substitute these values:

$$\begin{aligned} E_{\text{max}} &= \sqrt{\frac{(4\pi \times 10^{-7} \text{ T} \cdot \text{m/A})(3.00 \times 10^8 \text{ m/s})(3.0 \text{ W})}{2\pi(0.30 \text{ m})^2}} \\ &= 45 \text{ V/m} \end{aligned}$$

continued

34.3 continued

Use Equation 34.21 to find the magnetic field magnitude:

$$B_{\max} = \frac{E_{\max}}{c} = \frac{45 \text{ V/m}}{3.00 \times 10^8 \text{ m/s}} = 1.5 \times 10^{-7} \text{ T}$$

Finalize This value of the magnetic field magnitude is two orders of magnitude smaller than the Earth's magnetic field.

34.5 Momentum and Radiation Pressure

Electromagnetic waves transport linear momentum as well as energy. As this momentum is absorbed by some surface, pressure is exerted on the surface. Therefore, the surface is a nonisolated system for momentum. In this discussion, let's assume the electromagnetic wave strikes the surface at normal incidence and transports a total energy T_{ER} to the surface in a time interval Δt . Maxwell showed that if the surface absorbs all the incident energy T_{ER} in this time interval (as does a black body, introduced in Section 20.7), the total momentum \vec{p} transported to the surface has a magnitude

Momentum transported to a perfectly absorbing surface

$$p = \frac{T_{\text{ER}}}{c} \quad (\text{complete absorption}) \quad (34.27)$$

The pressure P exerted on the surface is defined as force per unit area F/A , which when combined with Newton's second law gives

$$P = \frac{F}{A} = \frac{1}{A} \frac{dp}{dt}$$

Substituting Equation 34.27 into this expression for pressure P gives

$$P = \frac{1}{A} \frac{dp}{dt} = \frac{1}{A} \frac{d}{dt} \left(\frac{T_{\text{ER}}}{c} \right) = \frac{1}{c} \frac{(dT_{\text{ER}}/dt)}{A}$$

We recognize $(dT_{\text{ER}}/dt)/A$ as the rate at which energy is arriving at the surface per unit area, which is the magnitude of the Poynting vector. Therefore, the radiation pressure P exerted on the perfectly absorbing surface is

Radiation pressure exerted on a perfectly absorbing surface

$$P = \frac{S}{c} \quad (\text{complete absorption}) \quad (34.28)$$

If the surface is a perfect reflector (such as a mirror) and incidence is normal, the momentum transported to the surface in a time interval Δt is twice that given by Equation 34.27. That is, the momentum transferred to the surface by the incoming light is $p = T_{\text{ER}}/c$ and that transferred by the reflected light is also $p = T_{\text{ER}}/c$. Therefore,

$$p = \frac{2T_{\text{ER}}}{c} \quad (\text{complete reflection}) \quad (34.29)$$

The radiation pressure exerted on a perfectly reflecting surface for normal incidence of the wave is

$$P = \frac{2S}{c} \quad (\text{complete reflection}) \quad (34.30)$$

The pressure on a surface having a reflectivity somewhere between these two extremes has a value between S/c and $2S/c$, depending on the properties of the surface.

Although radiation pressures are very small (about $5 \times 10^{-6} \text{ N/m}^2$ for direct sunlight), *solar sailing* is a low-cost means of sending spacecraft to the planets. Large

Pitfall Prevention 34.5

So Many p's We have p for momentum and P for pressure, and they are both related to P for power! Be sure to keep all these symbols straight.

Radiation pressure exerted on a perfectly reflecting surface

sheets experience radiation pressure from sunlight and are used in much the way canvas sheets are used on earthbound sailboats. In 2010, the Japan Aerospace Exploration Agency (JAXA) launched the first spacecraft to use solar sailing as its primary propulsion, *IKAROS* (Interplanetary Kite-craft Accelerated by Radiation of the Sun). Successful testing of this spacecraft would lead to a larger effort to send a spacecraft to Jupiter by radiation pressure later in the present decade.

- Quick Quiz 34.4** To maximize the radiation pressure on the sails of a spacecraft using solar sailing, should the sheets be (a) very black to absorb as much sunlight as possible or (b) very shiny to reflect as much sunlight as possible?

Conceptual Example 34.4

Sweeping the Solar System

A great amount of dust exists in interplanetary space. Although in theory these dust particles can vary in size from molecular size to a much larger size, very little of the dust in our solar system is smaller than about $0.2 \mu\text{m}$. Why?

SOLUTION

The dust particles are subject to two significant forces: the gravitational force that draws them toward the Sun and the radiation-pressure force that pushes them away from the Sun. The gravitational force is proportional to the cube of the radius of a spherical dust particle because it is proportional to the mass and therefore to the volume $4\pi r^3/3$ of the particle. The radiation pressure is proportional to the square of the radius because it depends on the planar cross section of the particle. For large particles, the gravitational force is greater than the force from radiation pressure. For particles having radii less than about $0.2 \mu\text{m}$, the radiation-pressure force is greater than the gravitational force. As a result, these particles are swept out of our solar system by sunlight.

Example 34.5

Pressure from a Laser Pointer

When giving presentations, many people use a laser pointer to direct the attention of the audience to information on a screen. If a 3.0-mW pointer creates a spot on a screen that is 2.0 mm in diameter, determine the radiation pressure on a screen that reflects 70% of the light that strikes it. The power 3.0 mW is a time-averaged value.

SOLUTION

Conceptualize Imagine the waves striking the screen and exerting a radiation pressure on it. The pressure should not be very large.

Categorize This problem involves a calculation of radiation pressure using an approach like that leading to Equation 34.28 or Equation 34.30, but it is complicated by the 70% reflection.

Analyze We begin by determining the magnitude of the beam's Poynting vector.

Divide the time-averaged power delivered via the electromagnetic wave by the cross-sectional area of the beam:

$$S_{\text{avg}} = \frac{(\text{Power})_{\text{avg}}}{A} = \frac{(\text{Power})_{\text{avg}}}{\pi r^2} = \frac{3.0 \times 10^{-3} \text{ W}}{\pi \left(\frac{2.0 \times 10^{-3} \text{ m}}{2} \right)^2} = 955 \text{ W/m}^2$$

Now let's determine the radiation pressure from the laser beam. Equation 34.30 indicates that a completely reflected beam would apply an average pressure of $P_{\text{avg}} = 2S_{\text{avg}}/c$. We can model the actual reflection as follows. Imagine that the surface absorbs the beam, resulting in pressure $P_{\text{avg}} = S_{\text{avg}}/c$. Then the surface emits the beam, resulting in additional pressure $P_{\text{avg}} = S_{\text{avg}}/c$. If the surface emits only a fraction f of the beam (so that f is the amount of the incident beam reflected), the pressure due to the emitted beam is $P_{\text{avg}} = fS_{\text{avg}}/c$.

Use this model to find the total pressure on the surface due to absorption and re-emission (reflection):

$$P_{\text{avg}} = \frac{S_{\text{avg}}}{c} + f \frac{S_{\text{avg}}}{c} = (1 + f) \frac{S_{\text{avg}}}{c}$$

continued

34.5 continued

Evaluate this pressure for a beam that is 70% reflected:

$$P_{\text{avg}} = (1 + 0.70) \frac{955 \text{ W/m}^2}{3.0 \times 10^8 \text{ m/s}} = 5.4 \times 10^{-6} \text{ N/m}^2$$

Finalize The pressure has an extremely small value, as expected. (Recall from Section 14.2 that atmospheric pressure is approximately 10^5 N/m^2 .) Consider the magnitude of the Poynting vector, $S_{\text{avg}} = 955 \text{ W/m}^2$. It is about the same as the intensity of sunlight at the Earth's surface. For this reason, it is not safe to shine the beam of a laser pointer into a person's eyes, which may be more dangerous than looking directly at the Sun.

WHAT IF? What if the laser pointer is moved twice as far away from the screen? Does that affect the radiation pressure on the screen?

Answer Because a laser beam is popularly represented as a beam of light with constant cross section, you might think that the intensity of radiation, and therefore the radiation pressure, is independent of distance from the screen. A laser beam, however, does not have a constant cross section at all distances from the source; rather,

there is a small but measurable divergence of the beam. If the laser is moved farther away from the screen, the area of illumination on the screen increases, decreasing the intensity. In turn, the radiation pressure is reduced.

In addition, the doubled distance from the screen results in more loss of energy from the beam due to scattering from air molecules and dust particles as the light travels from the laser to the screen. This energy loss further reduces the radiation pressure on the screen.

The electric field lines resemble those of an electric dipole (shown in Fig. 23.20).

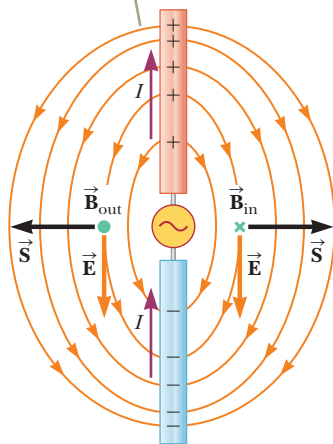


Figure 34.11 A half-wave antenna consists of two metal rods connected to an alternating voltage source. This diagram shows \vec{E} and \vec{B} at an arbitrary instant when the current is upward.

34.6 Production of Electromagnetic Waves by an Antenna

Stationary charges and steady currents cannot produce electromagnetic waves. If the current in a wire changes with time, however, the wire emits electromagnetic waves. The fundamental mechanism responsible for this radiation is the acceleration of a charged particle. **Whenever a charged particle accelerates, energy is transferred away from the particle by electromagnetic radiation.**

Let's consider the production of electromagnetic waves by a *half-wave antenna*. In this arrangement, two conducting rods are connected to a source of alternating voltage (such as an *LC* oscillator) as shown in Figure 34.11. The length of each rod is equal to one-quarter the wavelength of the radiation emitted when the oscillator operates at frequency f . The oscillator forces charges to accelerate back and forth between the two rods. Figure 34.11 shows the configuration of the electric and magnetic fields at some instant when the current is upward. The separation of charges in the upper and lower portions of the antenna make the electric field lines resemble those of an electric dipole. (As a result, this type of antenna is sometimes called a *dipole antenna*.) Because these charges are continuously oscillating between the two rods, the antenna can be approximated by an oscillating electric dipole. The current representing the movement of charges between the ends of the antenna produces magnetic field lines forming concentric circles around the antenna that are perpendicular to the electric field lines at all points. The magnetic field is zero at all points along the axis of the antenna. Furthermore, \vec{E} and \vec{B} are 90° out of phase in time; for example, the current is zero when the charges at the outer ends of the rods are at a maximum.

At the two points where the magnetic field is shown in Figure 34.11, the Poynting vector \vec{S} is directed radially outward, indicating that energy is flowing away from the antenna at this instant. At later times, the fields and the Poynting vector reverse direction as the current alternates. Because \vec{E} and \vec{B} are 90° out of phase at points near the dipole, the net energy flow is zero. From this fact, you might conclude (incorrectly) that no energy is radiated by the dipole.

Energy is indeed radiated, however. Because the dipole fields fall off as $1/r^3$ (as shown in Example 23.6 for the electric field of a static dipole), they are negligible at great distances from the antenna. At these great distances, something else causes

a type of radiation different from that close to the antenna. The source of this radiation is the continuous induction of an electric field by the time-varying magnetic field and the induction of a magnetic field by the time-varying electric field, predicted by Equations 34.6 and 34.7. The electric and magnetic fields produced in this manner are in phase with each other and vary as $1/r$. The result is an outward flow of energy at all times.

The angular dependence of the radiation intensity produced by a dipole antenna is shown in Figure 34.12. Notice that the intensity and the power radiated are a maximum in a plane that is perpendicular to the antenna and passing through its midpoint. Furthermore, the power radiated is zero along the antenna's axis. A mathematical solution to Maxwell's equations for the dipole antenna shows that the intensity of the radiation varies as $(\sin^2 \theta)/r^2$, where θ is measured from the axis of the antenna.

Electromagnetic waves can also induce currents in a receiving antenna. The response of a dipole receiving antenna at a given position is a maximum when the antenna axis is parallel to the electric field at that point and zero when the axis is perpendicular to the electric field.

- Quick Quiz 34.5** If the antenna in Figure 34.11 represents the source of a distant radio station, what would be the best orientation for your portable radio antenna located to the right of the figure? (a) up-down along the page (b) left-right along the page (c) perpendicular to the page

34.7 The Spectrum of Electromagnetic Waves

The various types of electromagnetic waves are listed in Figure 34.13 (page 1046), which shows the **electromagnetic spectrum**. Notice the wide ranges of frequencies and wavelengths. No sharp dividing point exists between one type of wave and the next. Remember that all forms of the various types of radiation are produced by the same phenomenon: acceleration of electric charges. The names given to the types of waves are simply a convenient way to describe the region of the spectrum in which they lie.

Radio waves, whose wavelengths range from more than 10^4 m to about 0.1 m, are the result of charges accelerating through conducting wires. They are generated by such electronic devices as LC oscillators and are used in radio and television communication systems.

Microwaves have wavelengths ranging from approximately 0.3 m to 10^{-4} m and are also generated by electronic devices. Because of their short wavelengths, they are well suited for radar systems and for studying the atomic and molecular properties of matter. Microwave ovens are an interesting domestic application of these waves. It has been suggested that solar energy could be harnessed by beaming microwaves to the Earth from a solar collector in space.

Infrared waves have wavelengths ranging from approximately 10^{-3} m to the longest wavelength of visible light, 7×10^{-7} m. These waves, produced by molecules and room-temperature objects, are readily absorbed by most materials. The infrared (IR) energy absorbed by a substance appears as internal energy because the energy agitates the object's atoms, increasing their vibrational or translational motion, which results in a temperature increase. Infrared radiation has practical and scientific applications in many areas, including physical therapy, IR photography, and vibrational spectroscopy.

Visible light, the most familiar form of electromagnetic waves, is the part of the electromagnetic spectrum the human eye can detect. Light is produced by the rearrangement of electrons in atoms and molecules. The various wavelengths of visible light, which correspond to different colors, range from red ($\lambda \approx 7 \times 10^{-7}$ m) to violet ($\lambda \approx 4 \times 10^{-7}$ m). The sensitivity of the human eye is a function of wavelength, being a maximum at a wavelength of about 5.5×10^{-7} m. With that in mind, why do you suppose tennis balls often have a yellow-green color? Table 34.1 provides

The distance from the origin to a point on the edge of the tan shape is proportional to the magnitude of the Poynting vector and the intensity of radiation in that direction.

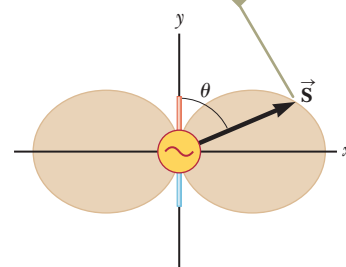


Figure 34.12 Angular dependence of the intensity of radiation produced by an oscillating electric dipole.

Pitfall Prevention 34.6

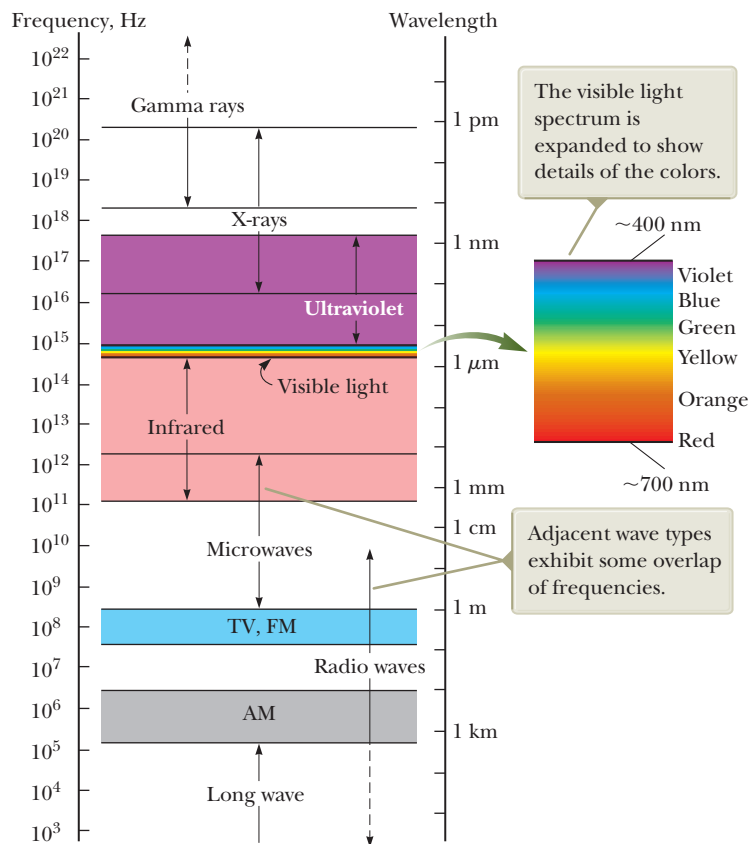
"Heat Rays" Infrared rays are often called "heat rays," but this terminology is a misnomer. Although infrared radiation is used to raise or maintain temperature as in the case of keeping food warm with "heat lamps" at a fast-food restaurant, all wavelengths of electromagnetic radiation carry energy that can cause the temperature of a system to increase. As an example, consider a potato baking in your microwave oven.

Table 34.1 Approximate Correspondence Between Wavelengths of Visible Light and Color

Wavelength Range (nm)	Color Description
400–430	Violet
430–485	Blue
485–560	Green
560–590	Yellow
590–625	Orange
625–700	Red

Note: The wavelength ranges here are approximate. Different people will describe colors differently.

Figure 34.13 The electromagnetic spectrum.



approximate correspondences between the wavelength of visible light and the color assigned to it by humans. Light is the basis of the science of optics and optical instruments, to be discussed in Chapters 35 through 38.

Ultraviolet waves cover wavelengths ranging from approximately 4×10^{-7} m to 6×10^{-10} m. The Sun is an important source of ultraviolet (UV) light, which is the main cause of sunburn. Sunscreen lotions are transparent to visible light but absorb most UV light. The higher a sunscreen's solar protection factor, or SPF, the greater the percentage of UV light absorbed. Ultraviolet rays have also been implicated in the formation of cataracts, a clouding of the lens inside the eye.

Most of the UV light from the Sun is absorbed by ozone (O_3) molecules in the Earth's upper atmosphere, in a layer called the stratosphere. This ozone shield converts lethal high-energy UV radiation to IR radiation, which in turn warms the stratosphere.

X-rays have wavelengths in the range from approximately 10^{-8} m to 10^{-12} m. The most common source of x-rays is the stopping of high-energy electrons upon bombarding a metal target. X-rays are used as a diagnostic tool in medicine and as a treatment for certain forms of cancer. Because x-rays can damage or destroy living tissues and organisms, care must be taken to avoid unnecessary exposure or overexposure. X-rays are also used in the study of crystal structure because x-ray wavelengths are comparable to the atomic separation distances in solids (about 0.1 nm).

Gamma rays are electromagnetic waves emitted by radioactive nuclei and during certain nuclear reactions. High-energy gamma rays are a component of cosmic rays that enter the Earth's atmosphere from space. They have wavelengths ranging from approximately 10^{-10} m to less than 10^{-14} m. Gamma rays are highly penetrating and produce serious damage when absorbed by living tissues. Consequently, those working near such dangerous radiation must be protected with heavily absorbing materials such as thick layers of lead.



Wearing sunglasses that do not block ultraviolet (UV) light is worse for your eyes than wearing no sunglasses at all. The lenses of any sunglasses absorb some visible light, thereby causing the wearer's pupils to dilate. If the glasses do not also block UV light, more damage may be done to the lens of the eye because of the dilated pupils. If you wear no sunglasses at all, your pupils are contracted, you squint, and much less UV light enters your eyes. High-quality sunglasses block nearly all the eye-damaging UV light.

Quick Quiz 34.6 In many kitchens, a microwave oven is used to cook food. The frequency of the microwaves is on the order of 10^{10} Hz. Are the wavelengths of these microwaves on the order of (a) kilometers, (b) meters, (c) centimeters, or (d) micrometers?

Quick Quiz 34.7 A radio wave of frequency on the order of 10^5 Hz is used to carry a sound wave with a frequency on the order of 10^3 Hz. Is the wavelength of this radio wave on the order of (a) kilometers, (b) meters, (c) centimeters, or (d) micrometers?

Summary

Definitions

In a region of space in which there is a changing electric field, there is a **displacement current** defined as

$$I_d \equiv \epsilon_0 \frac{d\Phi_E}{dt} \quad (34.1)$$

where ϵ_0 is the permittivity of free space (see Section 23.3) and $\Phi_E = \int \vec{E} \cdot d\vec{A}$ is the electric flux.

The rate at which energy passes through a unit area by electromagnetic radiation is described by the **Poynting vector** \vec{S} , where

$$\vec{S} \equiv \frac{1}{\mu_0} \vec{E} \times \vec{B} \quad (34.22)$$

Concepts and Principles

When used with the **Lorentz force law**, $\vec{F} = q\vec{E} + q\vec{v} \times \vec{B}$, **Maxwell's equations** describe all electromagnetic phenomena:

$$\oint \vec{E} \cdot d\vec{A} = \frac{q}{\epsilon_0} \quad (34.4)$$

$$\oint \vec{E} \cdot d\vec{s} = -\frac{d\Phi_B}{dt} \quad (34.6)$$

$$\oint \vec{B} \cdot d\vec{A} = 0 \quad (34.5)$$

$$\oint \vec{B} \cdot d\vec{s} = \mu_0 I + \epsilon_0 \mu_0 \frac{d\Phi_E}{dt} \quad (34.7)$$

Electromagnetic waves, which are predicted by Maxwell's equations, have the following properties and are described by the following mathematical representations of the traveling wave model for electromagnetic waves.

- The electric field and the magnetic field each satisfy a wave equation. These two wave equations, which can be obtained from Maxwell's third and fourth equations, are

$$\frac{\partial^2 E}{\partial x^2} = \mu_0 \epsilon_0 \frac{\partial^2 E}{\partial t^2} \quad (34.15)$$

$$\frac{\partial^2 B}{\partial x^2} = \mu_0 \epsilon_0 \frac{\partial^2 B}{\partial t^2} \quad (34.16)$$

- The waves travel through a vacuum with the speed of light c , where

$$c = \frac{1}{\sqrt{\mu_0 \epsilon_0}} \quad (34.17)$$

- Numerically, the speed of electromagnetic waves in a vacuum is 3.00×10^8 m/s.
- The wavelength and frequency of electromagnetic waves are related by

$$\lambda = \frac{c}{f} = \frac{3.00 \times 10^8 \text{ m/s}}{f} \quad (34.20)$$

- The electric and magnetic fields are perpendicular to each other and perpendicular to the direction of wave propagation.
- The instantaneous magnitudes of \vec{E} and \vec{B} in an electromagnetic wave are related by the expression

$$\frac{E}{B} = c \quad (34.21)$$

- Electromagnetic waves carry energy.
- Electromagnetic waves carry momentum.

continued

Because electromagnetic waves carry momentum, they exert pressure on surfaces. If an electromagnetic wave whose Poynting vector is \vec{S} is completely absorbed by a surface upon which it is normally incident, the radiation pressure on that surface is

$$P = \frac{S}{c} \quad (\text{complete absorption}) \quad (34.28)$$

If the surface totally reflects a normally incident wave, the pressure is doubled.

The average value of the Poynting vector for a plane electromagnetic wave has a magnitude

$$S_{\text{avg}} = \frac{E_{\text{max}} B_{\text{max}}}{2\mu_0} = \frac{E_{\text{max}}^2}{2\mu_0 c} = \frac{c B_{\text{max}}^2}{2\mu_0} \quad (34.24)$$

The intensity of a sinusoidal plane electromagnetic wave equals the average value of the Poynting vector taken over one or more cycles.

The electric and magnetic fields of a sinusoidal plane electromagnetic wave propagating in the positive x direction can be written as

$$E = E_{\text{max}} \cos(kx - \omega t) \quad (34.18)$$

$$B = B_{\text{max}} \cos(kx - \omega t) \quad (34.19)$$

where k is the angular wave number and ω is the angular frequency of the wave. These equations represent special solutions to the wave equations for E and B .

The electromagnetic spectrum includes waves covering a broad range of wavelengths, from long radio waves at more than 10^4 m to gamma rays at less than 10^{-14} m.

Objective Questions

1. denotes answer available in *Student Solutions Manual/Study Guide*

- A spherical interplanetary grain of dust of radius $0.2 \mu\text{m}$ is at a distance r_1 from the Sun. The gravitational force exerted by the Sun on the grain just balances the force due to radiation pressure from the Sun's light. (i) Assume the grain is moved to a distance $2r_1$ from the Sun and released. At this location, what is the net force exerted on the grain? (a) toward the Sun (b) away from the Sun (c) zero (d) impossible to determine without knowing the mass of the grain (ii) Now assume the grain is moved back to its original location at r_1 , compressed so that it crystallizes into a sphere with significantly higher density, and then released. In this situation, what is the net force exerted on the grain? Choose from the same possibilities as in part (i).
- A small source radiates an electromagnetic wave with a single frequency into vacuum, equally in all directions. (i) As the wave moves, does its frequency (a) increase, (b) decrease, or (c) stay constant? Using the same choices, answer the same question about (ii) its wavelength, (iii) its speed, (iv) its intensity, and (v) the amplitude of its electric field.
- A typical microwave oven operates at a frequency of 2.45 GHz. What is the wavelength associated with the electromagnetic waves in the oven? (a) 8.20 m (b) 12.2 cm (c) 1.20×10^8 m (d) 8.20×10^{-9} m (e) none of those answers
- A student working with a transmitting apparatus like Heinrich Hertz's wishes to adjust the electrodes to generate electromagnetic waves with a frequency half as large as before. (i) How large should she make the effective capacitance of the pair of electrodes? (a) four times larger than before (b) two times larger than before (c) one-half as large as before (d) one-fourth as large as before (e) none of those answers (ii) After she makes the required adjustment, what will the wavelength of the transmitted wave be? Choose from the same possibilities as in part (i).
- Assume you charge a comb by running it through your hair and then hold the comb next to a bar magnet. Do the electric and magnetic fields produced constitute an electromagnetic wave? (a) Yes they do, necessarily. (b) Yes they do because charged particles are moving inside the bar magnet. (c) They can, but only if the electric field of the comb and the magnetic field of the magnet are perpendicular. (d) They can, but only if both the comb and the magnet are moving. (e) They can, if either the comb or the magnet or both are accelerating.
- Which of the following statements are true regarding electromagnetic waves traveling through a vacuum? More than one statement may be correct. (a) All waves have the same wavelength. (b) All waves have the same frequency. (c) All waves travel at 3.00×10^8 m/s. (d) The electric and magnetic fields associated with the waves are perpendicular to each other and to the direction of wave propagation. (e) The speed of the waves depends on their frequency.
- A plane electromagnetic wave with a single frequency moves in vacuum in the positive x direction. Its amplitude is uniform over the yz plane. (i) As the wave moves, does its frequency (a) increase, (b) decrease, or (c) stay constant? Using the same choices, answer the same question about (ii) its wavelength, (iii) its speed, (iv) its intensity, and (v) the amplitude of its magnetic field.

8. Assume the amplitude of the electric field in a plane electromagnetic wave is E_1 and the amplitude of the magnetic field is B_1 . The source of the wave is then adjusted so that the amplitude of the electric field doubles to become $2E_1$. (i) What happens to the amplitude of the magnetic field in this process? (a) It becomes four times larger. (b) It becomes two times larger. (c) It can stay constant. (d) It becomes one-half as large. (e) It becomes one-fourth as large. (ii) What happens to the intensity of the wave? Choose from the same possibilities as in part (i).
9. An electromagnetic wave with a peak magnetic field magnitude of 1.50×10^{-7} T has an associated peak electric field of what magnitude? (a) 0.500×10^{-15} N/C (b) 2.00×10^{-5} N/C (c) 2.20×10^4 N/C (d) 45.0 N/C (e) 22.0 N/C
10. (i) Rank the following kinds of waves according to their wavelength ranges from those with the largest typical or average wavelength to the smallest, noting any cases of equality: (a) gamma rays (b) microwaves (c) radio waves (d) visible light (e) x-rays (ii) Rank the kinds of waves according to their frequencies from highest to lowest. (iii) Rank the kinds of waves

according to their speeds in vacuum from fastest to slowest.

11. Consider an electromagnetic wave traveling in the positive y direction. The magnetic field associated with the wave at some location at some instant points in the negative x direction as shown in Figure OQ34.11. What is the direction of the electric field at this position and at this instant? (a) the positive x direction (b) the positive y direction (c) the positive z direction (d) the negative z direction (e) the negative y direction

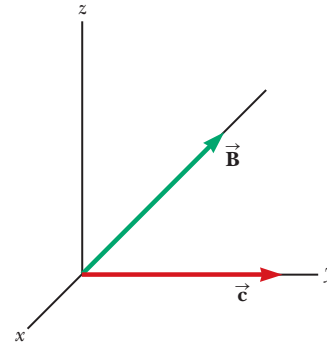


Figure OQ34.11

Conceptual Questions

1. denotes answer available in *Student Solutions Manual/Study Guide*

1. Suppose a creature from another planet has eyes that are sensitive to infrared radiation. Describe what the alien would see if it looked around your library. In particular, what would appear bright and what would appear dim?
2. For a given incident energy of an electromagnetic wave, why is the radiation pressure on a perfectly reflecting surface twice as great as that on a perfectly absorbing surface?
3. Radio stations often advertise “instant news.” If that means you can hear the news the instant the radio announcer speaks it, is the claim true? What approximate time interval is required for a message to travel from Maine to California by radio waves? (Assume the waves can be detected at this range.)
4. List at least three differences between sound waves and light waves.
5. If a high-frequency current exists in a solenoid containing a metallic core, the core becomes warm due to induction. Explain why the material rises in temperature in this situation.
6. When light (or other electromagnetic radiation) travels across a given region, (a) what is it that oscillates? (b) What is it that is transported?
7. Why should an infrared photograph of a person look different from a photograph taken with visible light?
8. Do Maxwell’s equations allow for the existence of magnetic monopoles? Explain.

9. Despite the advent of digital television, some viewers still use “rabbit ears” atop their sets (Fig. CQ34.9) instead of purchasing cable television service or satellite dishes. Certain orientations of the receiving antenna on a television set give better reception than others. Furthermore, the best orientation varies from station to station. Explain.



© iStockPhoto.com/kcdaw

Figure CQ34.9 Conceptual Question 9 and Problem 78.

10. What does a radio wave do to the charges in the receiving antenna to provide a signal for your car radio?
11. Describe the physical significance of the Poynting vector.
12. An empty plastic or glass dish being removed from a microwave oven can be cool to the touch, even when food on an adjoining dish is hot. How is this phenomenon possible?
13. What new concept did Maxwell’s generalized form of Ampère’s law include?

Problems

WebAssign

The problems found in this chapter may be assigned online in Enhanced WebAssign

1. straightforward; 2. intermediate; 3. challenging

1. full solution available in the *Student Solutions Manual/Study Guide*

AMT Analysis Model tutorial available in Enhanced WebAssign

GP Guided Problem

M Master It tutorial available in Enhanced WebAssign

W Watch It video solution available in Enhanced WebAssign

Section 34.1 Displacement Current and the General Form of Ampère's Law

1. Consider the situation shown in Figure P34.1. An electric field of 300 V/m is confined to a circular area $d = 10.0$ cm in diameter and directed outward perpendicular to the plane of the figure. If the field is increasing at a rate of 20.0 V/m \cdot s, what are (a) the direction and (b) the magnitude of the magnetic field at the point P , $r = 15.0$ cm from the center of the circle?

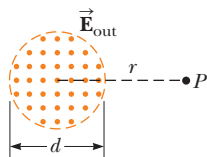


Figure P34.1

2. A 0.200-A current is charging a capacitor that has circular plates 10.0 cm in radius. If the plate separation is 4.00 mm, (a) what is the time rate of increase of electric field between the plates? (b) What is the magnetic field between the plates 5.00 cm from the center?

3. A 0.100-A current is charging a capacitor that has square plates 5.00 cm on each side. The plate separation is 4.00 mm. Find (a) the time rate of change of electric flux between the plates and (b) the displacement current between the plates.

Section 34.2 Maxwell's Equations and Hertz's Discoveries

4. An electron moves through a uniform electric field $\vec{E} = (2.50\hat{i} + 5.00\hat{j})$ V/m and a uniform magnetic field $\vec{B} = 0.400\hat{k}$ T. Determine the acceleration of the electron when it has a velocity $\vec{v} = 10.0\hat{i}$ m/s.

5. A proton moves through a region containing a uniform electric field given by $\vec{E} = 50.0\hat{j}$ V/m and a uniform magnetic field $\vec{B} = (0.200\hat{i} + 0.300\hat{j} + 0.400\hat{k})$ T. Determine the acceleration of the proton when it has a velocity $\vec{v} = 200\hat{i}$ m/s.

6. A very long, thin rod carries electric charge with the linear density 35.0 nC/m. It lies along the x axis and moves in the x direction at a speed of 1.50×10^7 m/s. (a) Find the electric field the rod creates at the point ($x = 0$, $y = 20.0$ cm, $z = 0$). (b) Find the magnetic field it creates at the same point. (c) Find the force exerted on an electron at this point, moving with a velocity of $(2.40 \times 10^8)\hat{i}$ m/s.

Section 34.3 Plane Electromagnetic Waves

Note: Assume the medium is vacuum unless specified otherwise.

7. Suppose you are located 180 m from a radio transmitter. (a) How many wavelengths are you from the transmitter if the station calls itself 1150 AM? (The AM band frequencies are in kilohertz.) (b) What if this station is 98.1 FM? (The FM band frequencies are in megahertz.)

8. A diathermy machine, used in physiotherapy, generates electromagnetic radiation that gives the effect of "deep heat" when absorbed in tissue. One assigned frequency for diathermy is 27.33 MHz. What is the wavelength of this radiation?

9. The distance to the North Star, Polaris, is approximately 6.44×10^{18} m. (a) If Polaris were to burn out today, how many years from now would we see it disappear? (b) What time interval is required for sunlight to reach the Earth? (c) What time interval is required for a microwave signal to travel from the Earth to the Moon and back?

10. The red light emitted by a helium–neon laser has a wavelength of 632.8 nm. What is the frequency of the light waves?

11. **Review.** A standing-wave pattern is set up by radio waves between two metal sheets 2.00 m apart, which is the shortest distance between the plates that produces a standing-wave pattern. What is the frequency of the radio waves?

12. An electromagnetic wave in vacuum has an electric field amplitude of 220 V/m. Calculate the amplitude of the corresponding magnetic field.

13. The speed of an electromagnetic wave traveling in a transparent nonmagnetic substance is $v = 1/\sqrt{\kappa\mu_0\epsilon_0}$, where κ is the dielectric constant of the substance. Determine the speed of light in water, which has a dielectric constant of 1.78 at optical frequencies.

14. A radar pulse returns to the transmitter–receiver after a total travel time of 4.00×10^{-4} s. How far away is the object that reflected the wave?

15. Figure P34.15 shows a plane electromagnetic sinusoidal wave propagating in the x direction. Suppose the wavelength is 50.0 m and the electric field vibrates in the xy plane with an amplitude of 22.0 V/m. Calculate

(a) the frequency of the wave and (b) the magnetic field \vec{B} when the electric field has its maximum value in the negative y direction. (c) Write an expression for \vec{B} with the correct unit vector, with numerical values for B_{\max} , k , and ω , and with its magnitude in the form

$$B = B_{\max} \cos(kx - \omega t)$$

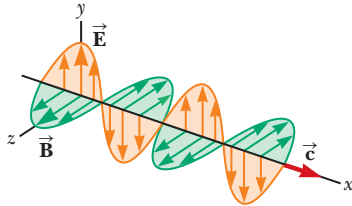


Figure P34.15 Problems 15 and 70.

16. Verify by substitution that the following equations are solutions to Equations 34.15 and 34.16, respectively:

$$E = E_{\max} \cos(kx - \omega t)$$

$$B = B_{\max} \cos(kx - \omega t)$$

17. **Review.** A microwave oven is powered by a magnetron, an electronic device that generates electromagnetic waves of frequency 2.45 GHz. The microwaves enter the oven and are reflected by the walls. The standing-wave pattern produced in the oven can cook food unevenly, with hot spots in the food at antinodes and cool spots at nodes, so a turntable is often used to rotate the food and distribute the energy. If a microwave oven intended for use with a turntable is instead used with a cooking dish in a fixed position, the antinodes can appear as burn marks on foods such as carrot strips or cheese. The separation distance between the burns is measured to be $6 \text{ cm} \pm 5\%$. From these data, calculate the speed of the microwaves.

18. *Why is the following situation impossible?* An electromagnetic wave travels through empty space with electric and magnetic fields described by

$$E = 9.00 \times 10^3 \cos[(9.00 \times 10^6)x - (3.00 \times 10^{15})t]$$

$$B = 3.00 \times 10^{-5} \cos[(9.00 \times 10^6)x - (3.00 \times 10^{15})t]$$

where all numerical values and variables are in SI units.

19. In SI units, the electric field in an electromagnetic wave is described by

$$E_y = 100 \sin(1.00 \times 10^7 x - \omega t)$$

Find (a) the amplitude of the corresponding magnetic field oscillations, (b) the wavelength λ , and (c) the frequency f .

Section 34.4 Energy Carried by Electromagnetic Waves

20. At what distance from the Sun is the intensity of sunlight three times the value at the Earth? (The average Earth–Sun separation is $1.496 \times 10^{11} \text{ m}$.)
21. If the intensity of sunlight at the Earth's surface under a fairly clear sky is 1000 W/m^2 , how much electromagnetic energy per cubic meter is contained in sunlight?

22. The power of sunlight reaching each square meter of the Earth's surface on a clear day in the tropics is close to 1000 W . On a winter day in Manitoba, the power concentration of sunlight can be 100 W/m^2 . Many human activities are described by a power per unit area on the order of 10^2 W/m^2 or less. (a) Consider, for example, a family of four paying \$66 to the electric company every 30 days for 600 kWh of energy carried by electrical transmission to their house, which has floor dimensions of 13.0 m by 9.50 m . Compute the power per unit area used by the family. (b) Consider a car 2.10 m wide and 4.90 m long traveling at 55.0 mi/h using gasoline having "heat of combustion" 44.0 MJ/kg with fuel economy 25.0 mi/gal . One gallon of gasoline has a mass of 2.54 kg . Find the power per unit area used by the car. (c) Explain why direct use of solar energy is not practical for running a conventional automobile. (d) What are some uses of solar energy that are more practical?

23. A community plans to build a facility to convert solar radiation to electrical power. The community requires 1.00 MW of power, and the system to be installed has an efficiency of 30.0% (that is, 30.0% of the solar energy incident on the surface is converted to useful energy that can power the community). Assuming sunlight has a constant intensity of 1000 W/m^2 , what must be the effective area of a perfectly absorbing surface used in such an installation?

24. In a region of free space, the electric field at an instant of time is $\vec{E} = (80.0\hat{i} + 32.0\hat{j} - 64.0\hat{k}) \text{ N/C}$ and the magnetic field is $\vec{B} = (0.200\hat{i} + 0.080\hat{j} + 0.290\hat{k}) \mu\text{T}$. (a) Show that the two fields are perpendicular to each other. (b) Determine the Poynting vector for these fields.

25. When a high-power laser is used in the Earth's atmosphere, the electric field associated with the laser beam can ionize the air, turning it into a conducting plasma that reflects the laser light. In dry air at 0°C and 1 atm , electric breakdown occurs for fields with amplitudes above about 3.00 MV/m . (a) What laser beam intensity will produce such a field? (b) At this maximum intensity, what power can be delivered in a cylindrical beam of diameter 5.00 mm ?

26. **Review.** Model the electromagnetic wave in a microwave oven as a plane traveling wave moving to the left, with an intensity of 25.0 kW/m^2 . An oven contains two cubical containers of small mass, each full of water. One has an edge length of 6.00 cm , and the other, 12.0 cm . Energy falls perpendicularly on one face of each container. The water in the smaller container absorbs 70.0% of the energy that falls on it. The water in the larger container absorbs 91.0% . That is, the fraction 0.300 of the incoming microwave energy passes through a 6.00-cm thickness of water, and the fraction $(0.300)(0.300) = 0.090$ passes through a 12.0-cm thickness. Assume a negligible amount of energy leaves either container by heat. Find the temperature change of the water in each container over a time interval of 480 s .

27. High-power lasers in factories are used to cut through cloth and metal (Fig. P34.27). One such laser has a beam diameter of 1.00 mm and generates an electric field having an amplitude of 0.700 MV/m at the target. Find (a) the amplitude of the magnetic field produced, (b) the intensity of the laser, and (c) the power delivered by the laser.



Philippe Plailly/SPL/Photo Researchers, Inc.

Figure P34.27

28. Consider a bright star in our night sky. Assume its distance from the Earth is 20.0 light-years (ly) and its power output is 4.00×10^{28} W, about 100 times that of the Sun. (a) Find the intensity of the starlight at the Earth. (b) Find the power of the starlight the Earth intercepts. One light-year is the distance traveled by light through a vacuum in one year.
29. What is the average magnitude of the Poynting vector 5.00 mi from a radio transmitter broadcasting isotropically (equally in all directions) with an average power of 250 kW?
30. Assuming the antenna of a 10.0-kW radio station radiates spherical electromagnetic waves, (a) compute the maximum value of the magnetic field 5.00 km from the antenna and (b) state how this value compares with the surface magnetic field of the Earth.
31. **Review.** An AM radio station broadcasts isotropically (equally in all directions) with an average power of 4.00 kW. A receiving antenna 65.0 cm long is at a location 4.00 mi from the transmitter. Compute the amplitude of the emf that is induced by this signal between the ends of the receiving antenna.
32. At what distance from a 100-W electromagnetic wave point source does $E_{\max} = 15.0$ V/m?
33. The filament of an incandescent lamp has a 150- Ω resistance and carries a direct current of 1.00 A. The filament is 8.00 cm long and 0.900 mm in radius. (a) Calculate the Poynting vector at the surface of the filament, associated with the static electric field producing the current and the current's static magnetic field. (b) Find the magnitude of the static electric and magnetic fields at the surface of the filament.
34. At one location on the Earth, the rms value of the magnetic field caused by solar radiation is $1.80 \mu\text{T}$. From this value, calculate (a) the rms electric field

due to solar radiation, (b) the average energy density of the solar component of electromagnetic radiation at this location, and (c) the average magnitude of the Poynting vector for the Sun's radiation.

Section 34.5 Momentum and Radiation Pressure

35. A 25.0-mW laser beam of diameter 2.00 mm is reflected at normal incidence by a perfectly reflecting mirror. Calculate the radiation pressure on the mirror.
36. A radio wave transmits 25.0 W/m^2 of power per unit area. A flat surface of area A is perpendicular to the direction of propagation of the wave. Assuming the surface is a perfect absorber, calculate the radiation pressure on it.
37. A 15.0-mW helium–neon laser emits a beam of circular cross section with a diameter of 2.00 mm. (a) Find the maximum electric field in the beam. (b) What total energy is contained in a 1.00-m length of the beam? (c) Find the momentum carried by a 1.00-m length of the beam.
38. A helium–neon laser emits a beam of circular cross section with a radius r and a power P . (a) Find the maximum electric field in the beam. (b) What total energy is contained in a length ℓ of the beam? (c) Find the momentum carried by a length ℓ of the beam.
39. A uniform circular disk of mass $m = 24.0$ g and radius $r = 40.0$ cm hangs vertically from a fixed, frictionless, horizontal hinge at a point on its circumference as shown in Figure P34.39a. A beam of electromagnetic radiation with intensity 10.0 MW/m^2 is incident on the disk in a direction perpendicular to its surface. The disk is perfectly absorbing, and the resulting radiation pressure makes the disk rotate. Assuming the radiation is *always* perpendicular to the surface of the disk, find the angle θ through which the disk rotates from the vertical as it reaches its new equilibrium position shown in Figure 34.39b.

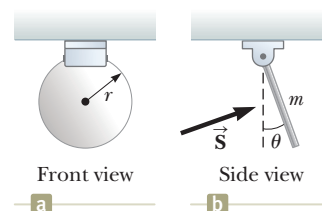


Figure P34.39

40. The intensity of sunlight at the Earth's distance from the Sun is $1\,370 \text{ W/m}^2$. Assume the Earth absorbs all the sunlight incident upon it. (a) Find the total force the Sun exerts on the Earth due to radiation pressure. (b) Explain how this force compares with the Sun's gravitational attraction.
41. A plane electromagnetic wave of intensity 6.00 W/m^2 , moving in the x direction, strikes a small perfectly reflecting pocket mirror, of area 40.0 cm^2 , held in the yz plane. (a) What momentum does the wave trans-

- fer to the mirror each second? (b) Find the force the wave exerts on the mirror. (c) Explain the relationship between the answers to parts (a) and (b).
42. Assume the intensity of solar radiation incident on the upper atmosphere of the Earth is $1\,370\text{ W/m}^2$ and use data from Table 13.2 as necessary. Determine (a) the intensity of solar radiation incident on Mars, (b) the total power incident on Mars, and (c) the radiation force that acts on that planet if it absorbs nearly all the light. (d) State how this force compares with the gravitational attraction exerted by the Sun on Mars. (e) Compare the ratio of the gravitational force to the light-pressure force exerted on the Earth and the ratio of these forces exerted on Mars, found in part (d).
43. A possible means of space flight is to place a perfectly reflecting aluminized sheet into orbit around the Earth and then use the light from the Sun to push this “solar sail.” Suppose a sail of area $A = 6.00 \times 10^5\text{ m}^2$ and mass $m = 6.00 \times 10^3\text{ kg}$ is placed in orbit facing the Sun. Ignore all gravitational effects and assume a solar intensity of $1\,370\text{ W/m}^2$. (a) What force is exerted on the sail? (b) What is the sail’s acceleration? (c) Assuming the acceleration calculated in part (b) remains constant, find the time interval required for the sail to reach the Moon, $3.84 \times 10^8\text{ m}$ away, starting from rest at the Earth.

Section 34.6 Production of Electromagnetic Waves by an Antenna

44. Extremely low-frequency (ELF) waves that can penetrate the oceans are the only practical means of communicating with distant submarines. (a) Calculate the length of a quarter-wavelength antenna for a transmitter generating ELF waves of frequency 75.0 Hz into air. (b) How practical is this means of communication?
45. A Marconi antenna, used by most AM radio stations, consists of the top half of a Hertz antenna (also known as a half-wave antenna because its length is $\lambda/2$). The lower end of this Marconi (quarter-wave) antenna is connected to Earth ground, and the ground itself serves as the missing lower half. What are the heights of the Marconi antennas for radio stations broadcasting at (a) 560 kHz and (b) $1\,600\text{ kHz}$?
46. A large, flat sheet carries a uniformly distributed electric current with current per unit width J_s . This current creates a magnetic field on both sides of the sheet, parallel to the sheet and perpendicular to the current, with magnitude $B = \frac{1}{2}\mu_0 J_s$. If the current is in the y direction and oscillates in time according to

$$J_{\max}(\cos \omega t)\hat{\mathbf{j}} = J_{\max}[\cos(-\omega t)]\hat{\mathbf{j}}$$

the sheet radiates an electromagnetic wave. Figure P34.46 shows such a wave emitted from one point on the sheet chosen to be the origin. Such electromagnetic waves are emitted from all points on the sheet. The magnetic field of the wave to the right of the sheet is described by the wave function

$$\vec{\mathbf{B}} = \frac{1}{2}\mu_0 J_{\max}[\cos(kx - \omega t)]\hat{\mathbf{k}}$$

- (a) Find the wave function for the electric field of the wave to the right of the sheet. (b) Find the Poynting vector as a function of x and t . (c) Find the intensity of the wave. (d) **What If?** If the sheet is to emit radiation in each direction (normal to the plane of the sheet) with intensity 570 W/m^2 , what maximum value of sinusoidal current density is required?

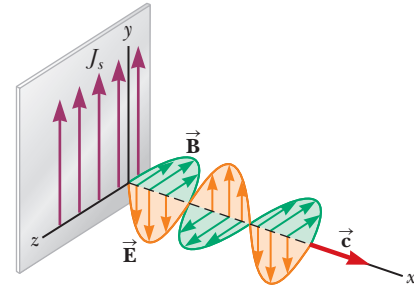


Figure P34.46

47. **Review.** Accelerating charges radiate electromagnetic waves. Calculate the wavelength of radiation produced by a proton in a cyclotron with a magnetic field of 0.350 T .
48. **Review.** Accelerating charges radiate electromagnetic waves. Calculate the wavelength of radiation produced by a proton of mass m_p moving in a circular path perpendicular to a magnetic field of magnitude B .
49. Two vertical radio-transmitting antennas are separated by half the broadcast wavelength and are driven in phase with each other. In what horizontal directions are (a) the strongest and (b) the weakest signals radiated?

Section 34.7 The Spectrum of Electromagnetic Waves

50. Compute an order-of-magnitude estimate for the frequency of an electromagnetic wave with wavelength equal to (a) your height and (b) the thickness of a sheet of paper. How is each wave classified on the electromagnetic spectrum?
51. What are the wavelengths of electromagnetic waves in free space that have frequencies of (a) $5.00 \times 10^{19}\text{ Hz}$ and (b) $4.00 \times 10^9\text{ Hz}$?
52. An important news announcement is transmitted by radio waves to people sitting next to their radios 100 km from the station and by sound waves to people sitting across the newsroom 3.00 m from the newscaster. Taking the speed of sound in air to be 343 m/s , who receives the news first? Explain.
53. In addition to cable and satellite broadcasts, television stations still use VHF and UHF bands for digitally broadcasting their signals. Twelve VHF television channels (channels 2 through 13) lie in the range of frequencies between 54.0 MHz and 216 MHz . Each channel is assigned a width of 6.00 MHz , with the two ranges $72.0\text{--}76.0\text{ MHz}$ and $88.0\text{--}174\text{ MHz}$ reserved for non-TV purposes. (Channel 2, for example, lies

between 54.0 and 60.0 MHz.) Calculate the broadcast wavelength range for (a) channel 4, (b) channel 6, and (c) channel 8.

Additional Problems

54. Classify waves with frequencies of 2 Hz, 2 kHz, 2 MHz, 2 GHz, 2 THz, 2 PHz, 2 EHz, 2 ZHz, and 2 YHz on the electromagnetic spectrum. Classify waves with wavelengths of 2 km, 2 m, 2 mm, 2 μm , 2 nm, 2 pm, 2 fm, and 2 am.

55. Assume the intensity of solar radiation incident on the cloud tops of the Earth is $1\,370\text{ W/m}^2$. (a) Taking the average Earth–Sun separation to be $1.496 \times 10^{11}\text{ m}$, calculate the total power radiated by the Sun. Determine the maximum values of (b) the electric field and (c) the magnetic field in the sunlight at the Earth's location.

56. In 1965, Arno Penzias and Robert Wilson discovered the cosmic microwave radiation left over from the big bang expansion of the Universe. Suppose the energy density of this background radiation is $4.00 \times 10^{-14}\text{ J/m}^3$. Determine the corresponding electric field amplitude.

57. The eye is most sensitive to light having a frequency of $5.45 \times 10^{14}\text{ Hz}$, which is in the green-yellow region of the visible electromagnetic spectrum. What is the wavelength of this light?

58. Write expressions for the electric and magnetic fields of a sinusoidal plane electromagnetic wave having an electric field amplitude of 300 V/m and a frequency of 3.00 GHz and traveling in the positive x direction.

59. One goal of the Russian space program is to illuminate dark northern cities with sunlight reflected to the Earth from a 200-m diameter mirrored surface in orbit. Several smaller prototypes have already been constructed and put into orbit. (a) Assume that sunlight with intensity $1\,370\text{ W/m}^2$ falls on the mirror nearly perpendicularly and that the atmosphere of the Earth allows 74.6% of the energy of sunlight to pass through it in clear weather. What is the power received by a city when the space mirror is reflecting light to it? (b) The plan is for the reflected sunlight to cover a circle of diameter 8.00 km. What is the intensity of light (the average magnitude of the Poynting vector) received by the city? (c) This intensity is what percentage of the vertical component of sunlight at St. Petersburg in January, when the sun reaches an angle of 7.00° above the horizon at noon?

60. A microwave source produces pulses of 20.0-GHz radiation, with each pulse lasting 1.00 ns. A parabolic reflector with a face area of radius 6.00 cm is used to focus the microwaves into a parallel beam of radiation as shown in Figure P34.60. The average power during each pulse is 25.0 kW. (a) What is the wavelength of these microwaves? (b) What is the total energy contained in each pulse? (c) Compute the average energy density inside each pulse. (d) Determine the amplitude

of the electric and magnetic fields in these microwaves. (e) Assuming that this pulsed beam strikes an absorbing surface, compute the force exerted on the surface during the 1.00-ns duration of each pulse.




Figure P34.60

61. The intensity of solar radiation at the top of the Earth's atmosphere is $1\,370\text{ W/m}^2$. Assuming 60% of the incoming solar energy reaches the Earth's surface and you absorb 50% of the incident energy, make an order-of-magnitude estimate of the amount of solar energy you absorb if you sunbathe for 60 minutes.

62. Two handheld radio transceivers with dipole antennas are separated by a large, fixed distance. If the transmitting antenna is vertical, what fraction of the maximum received power will appear in the receiving antenna when it is inclined from the vertical (a) by 15.0° ? (b) By 45.0° ? (c) By 90.0° ?

63. Consider a small, spherical particle of radius r located in space a distance $R = 3.75 \times 10^{11}\text{ m}$ from the Sun. Assume the particle has a perfectly absorbing surface and a mass density of $\rho = 1.50\text{ g/cm}^3$. Use $S = 214\text{ W/m}^2$ as the value of the solar intensity at the location of the particle. Calculate the value of r for which the particle is in equilibrium between the gravitational force and the force exerted by solar radiation.

64. Consider a small, spherical particle of radius r located in space a distance R from the Sun, of mass M_s . Assume the particle has a perfectly absorbing surface and a mass density ρ . The value of the solar intensity at the particle's location is S . Calculate the value of r for which the particle is in equilibrium between the gravitational force and the force exerted by solar radiation. Your answer should be in terms of S , R , ρ , and other constants.

65. A dish antenna having a diameter of 20.0 m receives (at normal incidence) a radio signal from a distant source as shown in Figure P34.65. The radio signal is a continuous sinusoidal wave with amplitude $E_{\text{max}} = 0.200\text{ }\mu\text{V/m}$.




Figure P34.65

Assume the antenna absorbs all the radiation that falls on the dish. (a) What is the amplitude of the magnetic field in this wave? (b) What is the intensity of the radiation received by this antenna? (c) What is the power received by the antenna? (d) What force is exerted by the radio waves on the antenna?

66. The Earth reflects approximately 38.0% of the incident sunlight from its clouds and surface. (a) Given that the intensity of solar radiation at the top of the atmosphere is $1\,370\text{ W/m}^2$, find the radiation pressure on the Earth, in pascals, at the location where the Sun is straight overhead. (b) State how this quantity compares with normal atmospheric pressure at the Earth's surface, which is 101 kPa.
67. **Review.** A 1.00-m-diameter circular mirror focuses the Sun's rays onto a circular absorbing plate 2.00 cm in radius, which holds a can containing 1.00 L of water at 20.0°C . (a) If the solar intensity is 1.00 kW/m^2 , what is the intensity on the absorbing plate? At the plate, what are the maximum magnitudes of the fields (b) \vec{E} and (c) \vec{B} ? (d) If 40.0% of the energy is absorbed, what time interval is required to bring the water to its boiling point?
68. (a) A stationary charged particle at the origin creates an electric flux of $487\text{ N}\cdot\text{m}^2/\text{C}$ through any closed surface surrounding the charge. Find the electric field it creates in the empty space around it as a function of radial distance r away from the particle. (b) A small source at the origin emits an electromagnetic wave with a single frequency into vacuum, equally in all directions, with power 25.0 W. Find the electric field amplitude as a function of radial distance away from the source. (c) At what distance is the amplitude of the electric field in the wave equal to 3.00 MV/m, representing the dielectric strength of air? (d) As the distance from the source doubles, what happens to the field amplitude? (e) State how the behavior shown in part (d) compares with the behavior of the field in part (a).
69. **Review.** (a) A homeowner has a solar water heater installed on the roof of his house (Fig. P34.69). The heater is a flat, closed box with excellent thermal insulation. Its interior is painted black, and its front face is made of insulating glass. Its emissivity for visible light



Figure P34.69

is 0.900, and its emissivity for infrared light is 0.700. Light from the noontime Sun is incident perpendicular to the glass with an intensity of $1\,000\text{ W/m}^2$, and no water enters or leaves the box. Find the steady-state temperature of the box's interior. (b) **What If?** The homeowner builds an identical box with no water tubes. It lies flat on the ground in front of the house. He uses it as a cold frame, where he plants seeds in early spring. Assuming the same noontime Sun is at an elevation angle of 50.0° , find the steady-state temperature of the interior of the box when its ventilation slots are tightly closed.

70. **GP** You may wish to review Sections 16.5 and 17.3 on the transport of energy by string waves and sound. Figure P34.15 is a graphical representation of an electromagnetic wave moving in the x direction. We wish to find an expression for the intensity of this wave by means of a different process from that by which Equation 34.24 was generated. (a) Sketch a graph of the electric field in this wave at the instant $t = 0$, letting your flat paper represent the xy plane. (b) Compute the energy density u_E in the electric field as a function of x at the instant $t = 0$. (c) Compute the energy density in the magnetic field u_B as a function of x at that instant. (d) Find the total energy density u as a function of x , expressed in terms of only the electric field amplitude. (e) The energy in a "shoebox" of length λ and frontal area A is $E_\lambda = \int_0^\lambda u A dx$. (The symbol E_λ for energy in a wavelength imitates the notation of Section 16.5.) Perform the integration to compute the amount of this energy in terms of A , λ , E_{max} , and universal constants. (f) We may think of the energy transport by the whole wave as a series of these shoeboxes going past as if carried on a conveyor belt. Each shoebox passes by a point in a time interval defined as the period $T = 1/f$ of the wave. Find the power the wave carries through area A . (g) The intensity of the wave is the power per unit area through which the wave passes. Compute this intensity in terms of E_{max} and universal constants. (h) Explain how your result compares with that given in Equation 34.24.
71. Lasers have been used to suspend spherical glass beads in the Earth's gravitational field. (a) A black bead has a radius of 0.500 mm and a density of 0.200 g/cm^3 . Determine the radiation intensity needed to support the bead. (b) What is the minimum power required for this laser?
72. Lasers have been used to suspend spherical glass beads in the Earth's gravitational field. (a) A black bead has radius r and density ρ . Determine the radiation intensity needed to support the bead. (b) What is the minimum power required for this laser?
73. **Review.** A 5.50-kg black cat and her four black kittens, each with mass 0.800 kg, sleep snuggled together on a mat on a cool night, with their bodies forming a hemisphere. Assume the hemisphere has a surface temperature of 31.0°C , an emissivity of 0.970, and a uniform density of 990 kg/m^3 . Find (a) the radius of the hemisphere, (b) the area of its curved surface, (c) the

radiated power emitted by the cats at their curved surface, and (d) the intensity of radiation at this surface. You may think of the emitted electromagnetic wave as having a single predominant frequency. Find (e) the amplitude of the electric field in the electromagnetic wave just outside the surface of the cozy pile and (f) the amplitude of the magnetic field. (g) **What If?** The next night, the kittens all sleep alone, curling up into separate hemispheres like their mother. Find the total radiated power of the family. (For simplicity, ignore the cats' absorption of radiation from the environment.)

74. The electromagnetic power radiated by a nonrelativistic particle with charge q moving with acceleration a is

$$P = \frac{q^2 a^2}{6\pi\epsilon_0 c^3}$$

where ϵ_0 is the permittivity of free space (also called the permittivity of vacuum) and c is the speed of light in vacuum. (a) Show that the right side of this equation has units of watts. An electron is placed in a constant electric field of magnitude 100 N/C. Determine (b) the acceleration of the electron and (c) the electromagnetic power radiated by this electron. (d) **What If?** If a proton is placed in a cyclotron with a radius of 0.500 m and a magnetic field of magnitude 0.350 T, what electromagnetic power does this proton radiate just before leaving the cyclotron?

75. **Review.** Gliese 581c is the first Earth-like extrasolar terrestrial planet discovered. Its parent star, Gliese 581, is a red dwarf that radiates electromagnetic waves with power 5.00×10^{24} W, which is only 1.30% of the power of the Sun. Assume the emissivity of the planet is equal for infrared and for visible light and the planet has a uniform surface temperature. Identify (a) the projected area over which the planet absorbs light from Gliese 581 and (b) the radiating area of the planet. (c) If an average temperature of 287 K is necessary for life to exist on Gliese 581c, what should the radius of the planet's orbit be?

Challenge Problems

76. A plane electromagnetic wave varies sinusoidally at 90.0 MHz as it travels through vacuum along the positive x direction. The peak value of the electric field is 2.00 mV/m, and it is directed along the positive y direction. Find (a) the wavelength, (b) the period, and (c) the maximum value of the magnetic field. (d) Write expressions in SI units for the space and time variations of the electric field and of the magnetic field.


Include both numerical values and unit vectors to indicate directions. (e) Find the average power per unit area this wave carries through space. (f) Find the average energy density in the radiation (in joules per cubic meter). (g) What radiation pressure would this wave exert upon a perfectly reflecting surface at normal incidence?

77. A linearly polarized microwave of wavelength 1.50 cm is directed along the positive x axis. The electric field vector has a maximum value of 175 V/m and vibrates in the xy plane. Assuming the magnetic field component of the wave can be written in the form $B = B_{\max} \sin(kx - \omega t)$, give values for (a) B_{\max} , (b) k , and (c) ω . (d) Determine in which plane the magnetic field vector vibrates. (e) Calculate the average value of the Poynting vector for this wave. (f) If this wave were directed at normal incidence onto a perfectly reflecting sheet, what radiation pressure would it exert? (g) What acceleration would be imparted to a 500-g sheet (perfectly reflecting and at normal incidence) with dimensions of $1.00 \text{ m} \times 0.750 \text{ m}$?

78. **Review.** In the absence of cable input or a satellite dish, a television set can use a dipole-receiving antenna for VHF channels and a loop antenna for UHF channels. In Figure CQ34.9, the "rabbit ears" form the VHF antenna and the smaller loop of wire is the UHF antenna. The UHF antenna produces an emf from the changing magnetic flux through the loop. The television station broadcasts a signal with a frequency f , and the signal has an electric field amplitude E_{\max} and a magnetic field amplitude B_{\max} at the location of the receiving antenna. (a) Using Faraday's law, derive an expression for the amplitude of the emf that appears in a single-turn, circular loop antenna with a radius r that is small compared with the wavelength of the wave. (b) If the electric field in the signal points vertically, what orientation of the loop gives the best reception?

79. **Review.** An astronaut, stranded in space 10.0 m from her spacecraft and at rest relative to it, has a mass (including equipment) of 110 kg. Because she has a 100-W flashlight that forms a directed beam, she considers using the beam as a photon rocket to propel herself continuously toward the spacecraft. (a) Calculate the time interval required for her to reach the spacecraft by this method. (b) **What If?** Suppose she throws the 3.00-kg flashlight in the direction away from the spacecraft instead. After being thrown, the flashlight moves at 12.0 m/s relative to the recoiling astronaut. After what time interval will the astronaut reach the spacecraft?

The Grand Tetons in western Wyoming are reflected in a smooth lake at sunset. The optical principles we study in this part of the book will explain the nature of the reflected image of the mountains and why the sky appears red. (David Muench/Terra/Corbis)



Light is basic to almost all life on the Earth. For example, plants convert the energy transferred by sunlight to chemical energy through photosynthesis. In addition, light is the principal means by which we are able to transmit and receive information to and from objects around us and throughout the Universe. Light is a form of electromagnetic radiation and represents energy transfer from the source to the observer.

Many phenomena in our everyday life depend on the properties of light. When you watch a television or view photos on a computer monitor, you are seeing millions of colors formed from combinations of only three colors that are physically on the screen: red, blue, and green. The blue color of the daytime sky is a result of the optical phenomenon of *scattering* of light by air molecules, as are the red and orange colors of sunrises and sunsets. You see your image in your bathroom mirror in the morning or the images of other cars in your rearview mirror when you are driving. These images result from *reflection* of light. If you wear glasses or contact lenses, you are depending on *refraction* of light for clear vision. The colors of a rainbow result from *dispersion* of light as it passes through raindrops hovering in the sky after a rainstorm. If you have ever seen the colored circles of the glory surrounding the shadow of your airplane on clouds as you fly above them, you are seeing an effect that results from *interference* of light. The phenomena mentioned here have been studied by scientists and are well understood.

In the introduction to Chapter 35, we discuss the dual nature of light. In some cases, it is best to model light as a stream of particles; in others, a wave model works better. Chapters 35 through 38 concentrate on those aspects of light that are best understood through the wave model of light. In Part 6, we will investigate the particle nature of light. ■

The Nature of Light and the Principles of Ray Optics

- 35.1 The Nature of Light
- 35.2 Measurements of the Speed of Light
- 35.3 The Ray Approximation in Ray Optics
- 35.4 Analysis Model: Wave Under Reflection
- 35.5 Analysis Model: Wave Under Refraction
- 35.6 Huygens's Principle
- 35.7 Dispersion
- 35.8 Total Internal Reflection



This photograph of a rainbow shows the range of colors from red on the top to violet on the bottom. The appearance of the rainbow depends on three optical phenomena discussed in this chapter: reflection, refraction, and dispersion. The faint pastel-colored bows beneath the main rainbow are called supernumerary bows. They are formed by interference between rays of light leaving raindrops below those causing the main rainbow.

(John W. Jewett, Jr.)

This first chapter on optics begins by introducing two historical models for light and discussing early methods for measuring the speed of light. Next we study the fundamental phenomena of geometric optics: reflection of light from a surface and refraction as the light crosses the boundary between two media. We also study the dispersion of light as it refracts into materials, resulting in visual displays such as the rainbow. Finally, we investigate the phenomenon of total internal reflection, which is the basis for the operation of optical fibers and the technology of fiber optics.

35.1 The Nature of Light

Before the beginning of the 19th century, light was considered to be a stream of particles that either was emitted by the object being viewed or emanated from the eyes of the viewer. Newton, the chief architect of the particle model of light, held that particles were emitted from a light source and that these particles stimulated

the sense of sight upon entering the eye. Using this idea, he was able to explain reflection and refraction.

Most scientists accepted Newton's particle model. During Newton's lifetime, however, another model was proposed, one that argued that light might be some sort of wave motion. In 1678, Dutch physicist and astronomer Christian Huygens showed that a wave model of light could also explain reflection and refraction.

In 1801, Thomas Young (1773–1829) provided the first clear experimental demonstration of the wave nature of light. Young showed that under appropriate conditions light rays interfere with one another according to the waves in interference model, just like mechanical waves (Chapter 18). Such behavior could not be explained at that time by a particle model because there was no conceivable way in which two or more particles could come together and cancel one another. Additional developments during the 19th century led to the general acceptance of the wave model of light, the most important resulting from the work of Maxwell, who in 1873 asserted that light was a form of high-frequency electromagnetic wave. As discussed in Chapter 34, Hertz provided experimental confirmation of Maxwell's theory in 1887 by producing and detecting electromagnetic waves.

Although the wave model and the classical theory of electricity and magnetism were able to explain most known properties of light, they could not explain some subsequent experiments. The most striking phenomenon is the photoelectric effect, also discovered by Hertz: when light strikes a metal surface, electrons are sometimes ejected from the surface. As one example of the difficulties that arose, experiments showed that the kinetic energy of an ejected electron is independent of the light intensity. This finding contradicted the wave model, which held that a more intense beam of light should add more energy to the electron. Einstein proposed an explanation of the photoelectric effect in 1905 using a model based on the concept of quantization developed by Max Planck (1858–1947) in 1900. The quantization model assumes the energy of a light wave is present in particles called *photons*; hence, the energy is said to be quantized. According to Einstein's theory, the energy of a photon is proportional to the frequency of the electromagnetic wave:

$$E = hf \quad (35.1)$$

where the constant of proportionality $h = 6.63 \times 10^{-34} \text{ J} \cdot \text{s}$ is called *Planck's constant*. We study this theory in Chapter 40.

In view of these developments, light must be regarded as having a dual nature. Light exhibits the characteristics of a wave in some situations and the characteristics of a particle in other situations. Light is light, to be sure. The question "Is light a wave or a particle?" is inappropriate, however. Sometimes light acts like a wave, and other times it acts like a particle. In the next few chapters, we investigate the wave nature of light.

35.2 Measurements of the Speed of Light

Light travels at such a high speed (to three digits, $c = 3.00 \times 10^8 \text{ m/s}$) that early attempts to measure its speed were unsuccessful. Galileo attempted to measure the speed of light by positioning two observers in towers separated by approximately 10 km. Each observer carried a shuttered lantern. One observer would open his lantern first, and then the other would open his lantern at the moment he saw the light from the first lantern. Galileo reasoned that by knowing the transit time of the light beams from one lantern to the other and the distance between the two lanterns, he could obtain the speed. His results were inconclusive. Today, we realize (as Galileo concluded) that it is impossible to measure the speed of light in this manner because the transit time for the light is so much less than the reaction time of the observers.



Photo Researchers, Inc.

Christian Huygens

Dutch Physicist and Astronomer (1629–1695)

Huygens is best known for his contributions to the fields of optics and dynamics. To Huygens, light was a type of vibratory motion, spreading out and producing the sensation of light when impinging on the eye. On the basis of this theory, he deduced the laws of reflection and refraction and explained the phenomenon of double refraction.

◀ Energy of a photon

In the time interval during which the Earth travels 90° around the Sun (three months), Jupiter travels only about 7.5° .

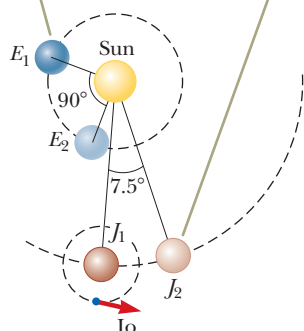


Figure 35.1 Roemer's method for measuring the speed of light (drawing not to scale).

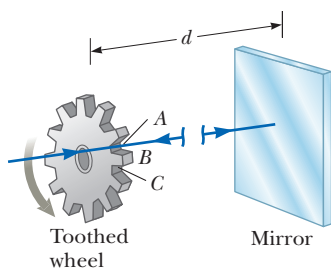


Figure 35.2 Fizeau's method for measuring the speed of light using a rotating toothed wheel. The light source is considered to be at the location of the wheel; therefore, the distance d is known.

Roemer's Method

In 1675, Danish astronomer Ole Roemer (1644–1710) made the first successful estimate of the speed of light. Roemer's technique involved astronomical observations of Io, one of the moons of Jupiter. Io has a period of revolution around Jupiter of approximately 42.5 h. The period of revolution of Jupiter around the Sun is about 12 yr; therefore, as the Earth moves through 90° around the Sun, Jupiter revolves through only $(\frac{1}{12})90^\circ = 7.5^\circ$ (Fig. 35.1).

An observer using the orbital motion of Io as a clock would expect the orbit to have a constant period. After collecting data for more than a year, however, Roemer observed a systematic variation in Io's period. He found that the periods were longer than average when the Earth was receding from Jupiter and shorter than average when the Earth was approaching Jupiter. Roemer attributed this variation in period to the distance between the Earth and Jupiter changing from one observation to the next.

Using Roemer's data, Huygens estimated the lower limit for the speed of light to be approximately 2.3×10^8 m/s. This experiment is important historically because it demonstrated that light does have a finite speed and gave an estimate of this speed.

Fizeau's Method

The first successful method for measuring the speed of light by means of purely terrestrial techniques was developed in 1849 by French physicist Armand H. L. Fizeau (1819–1896). Figure 35.2 represents a simplified diagram of Fizeau's apparatus. The basic procedure is to measure the total time interval during which light travels from some point to a distant mirror and back. If d is the distance between the light source (considered to be at the location of the wheel) and the mirror and if the time interval for one round trip is Δt , the speed of light is $c = 2d/\Delta t$.

To measure the transit time, Fizeau used a rotating toothed wheel, which converts a continuous beam of light into a series of light pulses. The rotation of such a wheel controls what an observer at the light source sees. For example, if the pulse traveling toward the mirror and passing the opening at point A in Figure 35.2 should return to the wheel at the instant tooth B had rotated into position to cover the return path, the pulse would not reach the observer. At a greater rate of rotation, the opening at point C could move into position to allow the reflected pulse to reach the observer. Knowing the distance d , the number of teeth in the wheel, and the angular speed of the wheel, Fizeau arrived at a value of 3.1×10^8 m/s. Similar measurements made by subsequent investigators yielded more precise values for c , which led to the currently accepted value of $2.997\,924\,58 \times 10^8$ m/s.

Example 35.1 Measuring the Speed of Light with Fizeau's Wheel AM

Assume Fizeau's wheel has 360 teeth and rotates at 27.5 rev/s when a pulse of light passing through opening A in Figure 35.2 is blocked by tooth B on its return. If the distance to the mirror is 7 500 m, what is the speed of light?

SOLUTION

Conceptualize Imagine a pulse of light passing through opening A in Figure 35.2 and reflecting from the mirror. By the time the pulse arrives back at the wheel, tooth B has rotated into the position previously occupied by opening A.

Categorize The wheel is a rigid object rotating at constant angular speed. We model the pulse of light as a *particle under constant speed*.

Analyze The wheel has 360 teeth, so it must have 360 openings. Therefore, because the light passes through opening A but is blocked by the tooth immediately adjacent to A, the wheel must rotate through an angular displacement of $\frac{1}{720}$ rev in the time interval during which the light pulse makes its round trip.

Use Equation 10.2, with the angular speed constant, to find the time interval for the pulse's round trip:

$$\Delta t = \frac{\Delta\theta}{\omega} = \frac{\frac{1}{720} \text{ rev}}{27.5 \text{ rev/s}} = 5.05 \times 10^{-5} \text{ s}$$

35.1 continued

From the particle under constant speed model, find the speed of the pulse of light:

$$c = \frac{2d}{\Delta t} = \frac{2(7\,500\text{ m})}{5.05 \times 10^{-5}\text{ s}} = 2.97 \times 10^8\text{ m/s}$$

Finalize This result is very close to the actual value of the speed of light.

35.3 The Ray Approximation in Ray Optics

The field of **ray optics** (sometimes called *geometric optics*) involves the study of the propagation of light. Ray optics assumes light travels in a fixed direction in a straight line as it passes through a uniform medium and changes its direction when it meets the surface of a different medium or if the optical properties of the medium are nonuniform in either space or time. In our study of ray optics here and in Chapter 36, we use what is called the **ray approximation**. To understand this approximation, first notice that the rays of a given wave are straight lines perpendicular to the wave fronts as illustrated in Figure 35.3 for a plane wave. In the ray approximation, a wave moving through a medium travels in a straight line in the direction of its rays.

If the wave meets a barrier in which there is a circular opening whose diameter is much larger than the wavelength as in Figure 35.4a, the wave emerging from the opening continues to move in a straight line (apart from some small edge effects); hence, the ray approximation is valid. If the diameter of the opening is on the order of the wavelength as in Figure 35.4b, the waves spread out from the opening in all directions. This effect, called *diffraction*, will be studied in Chapter 37. Finally, if the opening is much smaller than the wavelength, the opening can be approximated as a point source of waves as shown in Fig. 35.4c.

Similar effects are seen when waves encounter an opaque object of dimension d . In that case, when $\lambda \ll d$, the object casts a sharp shadow.

The ray approximation and the assumption that $\lambda \ll d$ are used in this chapter and in Chapter 36, both of which deal with ray optics. This approximation is very good for the study of mirrors, lenses, prisms, and associated optical instruments such as telescopes, cameras, and eyeglasses.

The rays, which always point in the direction of the wave propagation, are straight lines perpendicular to the wave fronts.

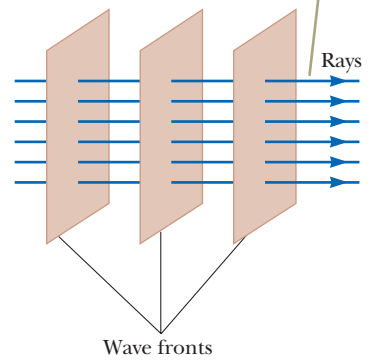


Figure 35.3 A plane wave propagating to the right.

35.4 Analysis Model: Wave Under Reflection

We introduced the concept of reflection of waves in a discussion of waves on strings in Section 16.4. As with waves on strings, when a light ray traveling in one medium encounters a boundary with another medium, part of the incident light

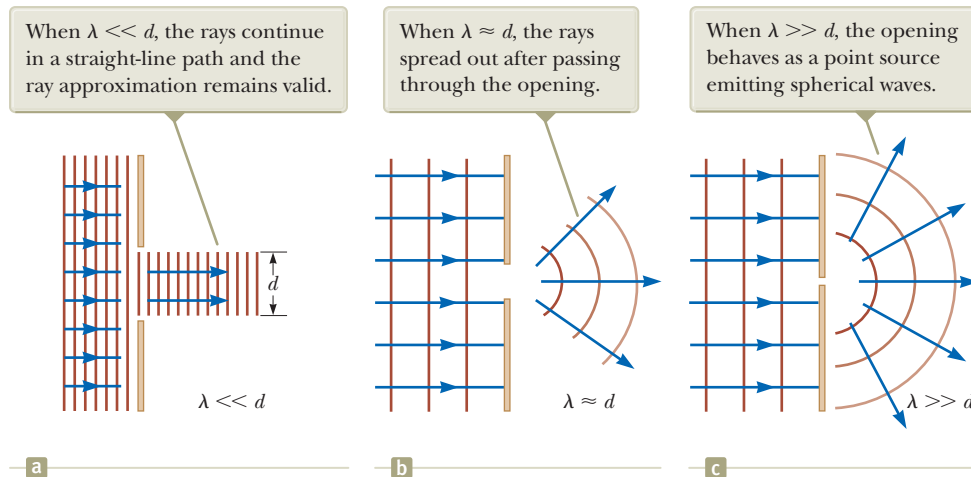


Figure 35.4 A plane wave of wavelength λ is incident on a barrier in which there is an opening of diameter d .

Figure 35.5 Schematic representation of (a) specular reflection, where the reflected rays are all parallel to one another, and (b) diffuse reflection, where the reflected rays travel in random directions. (c) and (d) Photographs of specular and diffuse reflection using laser light.

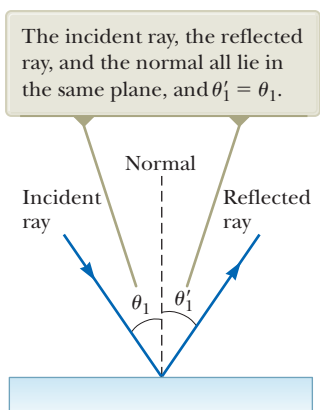
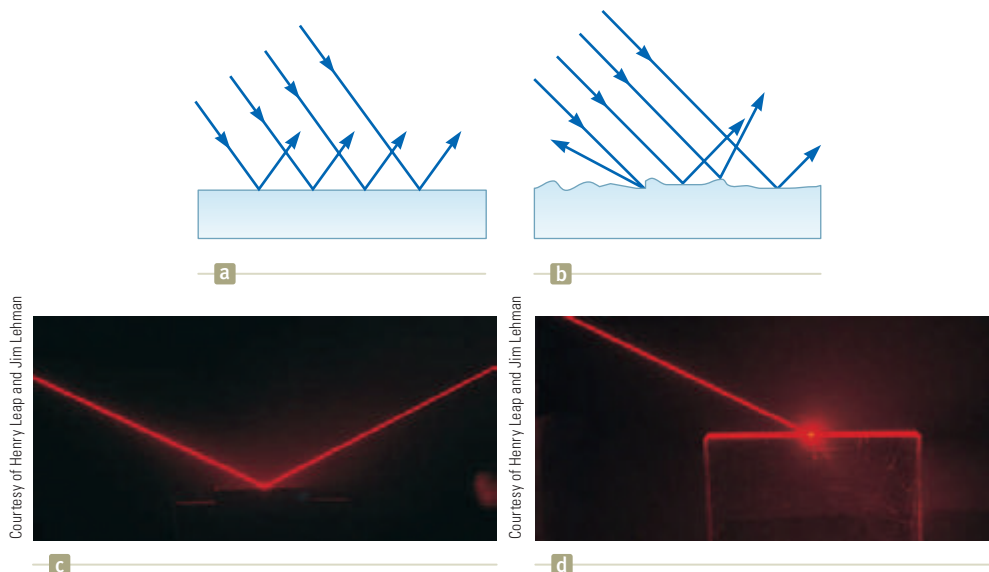


Figure 35.6 The wave under reflection model.

Pitfall Prevention 35.1

Subscript Notation The subscript 1 refers to parameters for the light in the initial medium. When light travels from one medium to another, we use the subscript 2 for the parameters associated with the light in the new medium. In this discussion, the light stays in the same medium, so we only have to use the subscript 1.

Law of reflection ►

$$\theta'_1 = \theta_1 \quad (35.2)$$

is reflected. For waves on a one-dimensional string, the reflected wave must necessarily be restricted to a direction along the string. For light waves traveling in three-dimensional space, no such restriction applies and the reflected light waves can be in directions different from the direction of the incident waves. Figure 35.5a shows several rays of a beam of light incident on a smooth, mirror-like, reflecting surface. The reflected rays are parallel to one another as indicated in the figure. The direction of a reflected ray is in the plane perpendicular to the reflecting surface that contains the incident ray. Reflection of light from such a smooth surface is called **specular reflection**. If the reflecting surface is rough as in Figure 35.5b, the surface reflects the rays not as a parallel set but in various directions. Reflection from any rough surface is known as **diffuse reflection**. A surface behaves as a smooth surface as long as the surface variations are much smaller than the wavelength of the incident light.

The difference between these two kinds of reflection explains why it is more difficult to see while driving on a rainy night than on a dry night. If the road is wet, the smooth surface of the water specularly reflects most of your headlight beams away from your car (and perhaps into the eyes of oncoming drivers). When the road is dry, its rough surface diffusely reflects part of your headlight beam back toward you, allowing you to see the road more clearly. Your bathroom mirror exhibits specular reflection, whereas light reflecting from this page experiences diffuse reflection. In this book, we restrict our study to specular reflection and use the term *reflection* to mean specular reflection.

Consider a light ray traveling in air and incident at an angle on a flat, smooth surface as shown in Figure 35.6. The incident and reflected rays make angles θ_1 and θ'_1 , respectively, where the angles are measured between the normal and the rays. (The normal is a line drawn perpendicular to the surface at the point where the incident ray strikes the surface.) Experiments and theory show that the angle of reflection equals the angle of incidence:

This relationship is called the **law of reflection**. Because reflection of waves from an interface between two media is a common phenomenon, we identify an analysis model for this situation: the **wave under reflection**. Equation 35.2 is the mathematical representation of this model.

- Quick Quiz 35.1** In the movies, you sometimes see an actor looking in a mirror and you can see his face in the mirror. It can be said with certainty that during the filming of such a scene, the actor sees in the mirror: (a) his face (b) your face (c) the director's face (d) the movie camera (e) impossible to determine

Example 35.2 The Double-Reflected Light Ray

AM

Two mirrors make an angle of 120° with each other as illustrated in Figure 35.7a. A ray is incident on mirror M_1 at an angle of 65° to the normal. Find the direction of the ray after it is reflected from mirror M_2 .

SOLUTION

Conceptualize Figure 35.7a helps conceptualize this situation. The incoming ray reflects from the first mirror, and the reflected ray is directed toward the second mirror. Therefore, there is a second reflection from the second mirror.

Categorize Because the interactions with both mirrors are simple reflections, we apply the *wave under reflection* model and some geometry.

Analyze From the law of reflection, the first reflected ray makes an angle of 65° with the normal.

Find the angle the first reflected ray makes with the horizontal:

$$\delta = 90^\circ - 65^\circ = 25^\circ$$

From the triangle made by the first reflected ray and the two mirrors, find the angle the reflected ray makes with M_2 :

$$\gamma = 180^\circ - 25^\circ - 120^\circ = 35^\circ$$

Find the angle the first reflected ray makes with the normal to M_2 :

$$\theta_{M_2} = 90^\circ - 35^\circ = 55^\circ$$

From the law of reflection, find the angle the second reflected ray makes with the normal to M_2 :

$$\theta'_{M_2} = \theta_{M_2} = 55^\circ$$

Finalize Let's explore variations in the angle between the mirrors as follows.

WHAT IF? If the incoming and outgoing rays in Figure 35.7a are extended behind the mirror, they cross at an angle of 60° and the overall change in direction of the light ray is 120° . This angle is the same as that between the mirrors. What if the angle between the mirrors is changed? Is the overall change in the direction of the light ray always equal to the angle between the mirrors?

Answer Making a general statement based on one data point or one observation is always a dangerous practice! Let's investigate the change in direction for a general situation. Figure 35.7b shows the mirrors at an arbitrary angle ϕ and the incoming light ray striking the mirror at an arbitrary angle θ with respect to the normal to the mirror surface. In accordance with the law of reflection and the sum of the interior angles of a triangle, the angle γ is given by $\gamma = 180^\circ - (90^\circ - \theta) - \phi = 90^\circ + \theta - \phi$.

Consider the triangle highlighted in yellow in Figure 35.7b and determine α :

$$\alpha + 2\gamma + 2(90^\circ - \theta) = 180^\circ \rightarrow \alpha = 2(\theta - \gamma)$$

Notice from Figure 35.7b that the change in direction of the light ray is angle β . Use the geometry in the figure to solve for β :

$$\begin{aligned} \beta &= 180^\circ - \alpha = 180^\circ - 2(\theta - \gamma) \\ &= 180^\circ - 2[\theta - (90^\circ + \theta - \phi)] = 360^\circ - 2\phi \end{aligned}$$

Notice that β is not equal to ϕ . For $\phi = 120^\circ$, we obtain $\beta = 120^\circ$, which happens to be the same as the mirror angle; that is true only for this special angle between the mirrors, however. For example, if $\phi = 90^\circ$, we obtain $\beta = 180^\circ$. In that case, the light is reflected straight back to its origin.

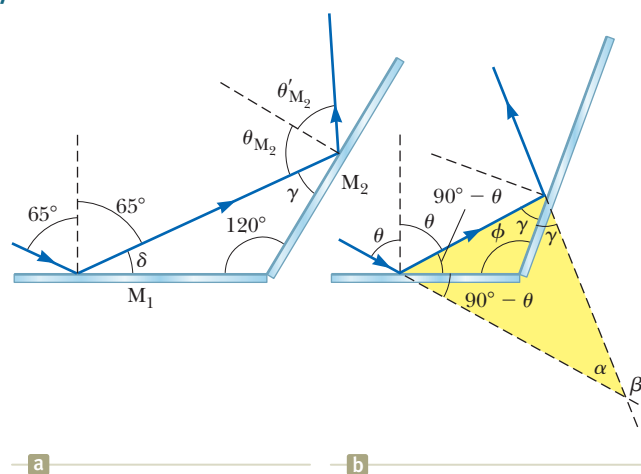


Figure 35.7 (Example 35.2) (a) Mirrors M_1 and M_2 make an angle of 120° with each other. (b) The geometry for an arbitrary mirror angle.

If the angle between two mirrors is 90° , the reflected beam returns to the source parallel to its original path as discussed in the What If? section of the preceding example. This phenomenon, called *retroreflection*, has many practical applications. If a third mirror is placed perpendicular to the first two so that the three form the

Figure 35.8 Applications of retroreflection.

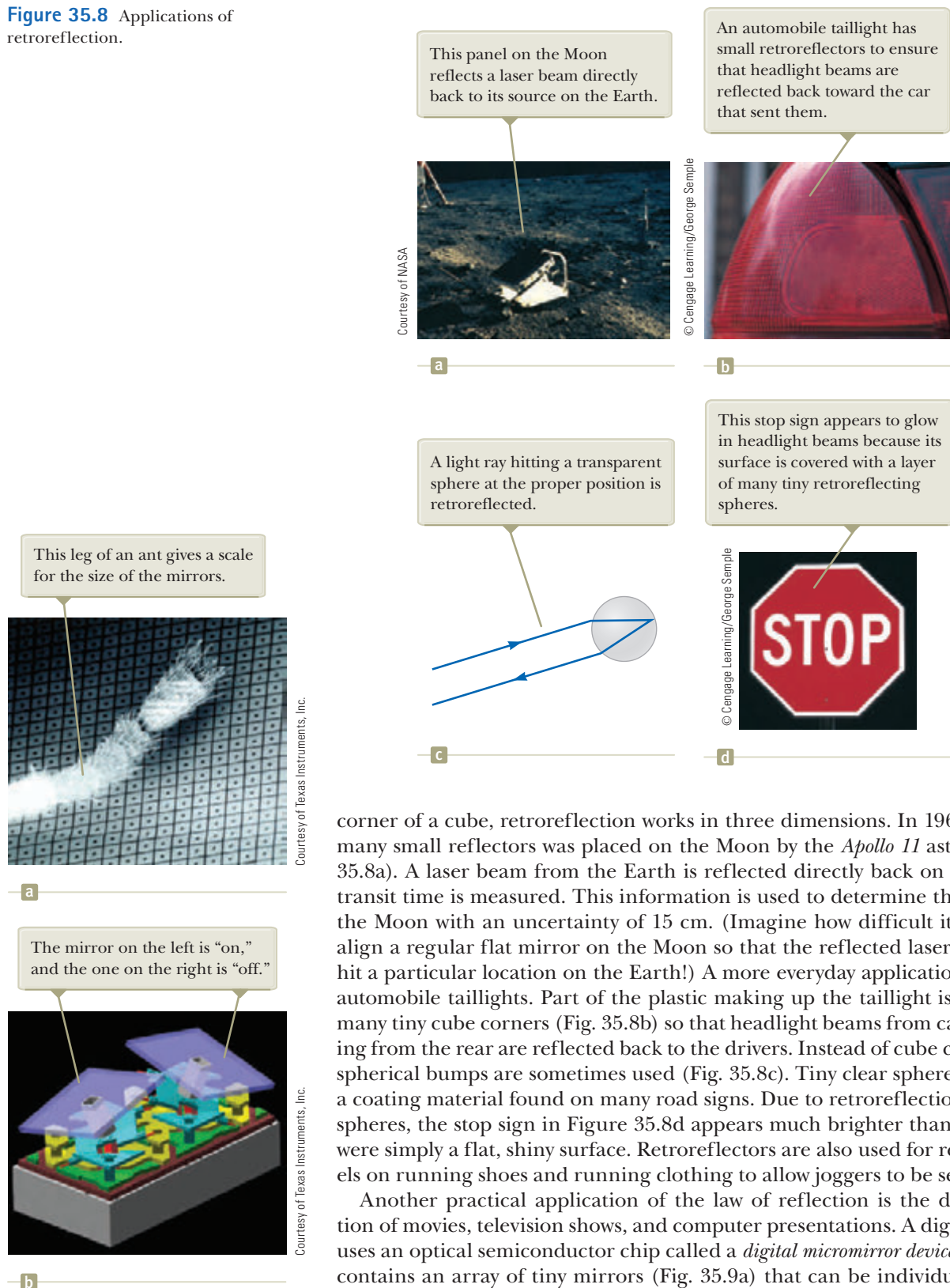


Figure 35.9 (a) An array of mirrors on the surface of a digital micromirror device. Each mirror has an area of approximately $16 \mu\text{m}^2$. (b) A close-up view of two single micromirrors.

corner of a cube, retroreflection works in three dimensions. In 1969, a panel of many small reflectors was placed on the Moon by the *Apollo 11* astronauts (Fig. 35.8a). A laser beam from the Earth is reflected directly back on itself, and its transit time is measured. This information is used to determine the distance to the Moon with an uncertainty of 15 cm. (Imagine how difficult it would be to align a regular flat mirror on the Moon so that the reflected laser beam would hit a particular location on the Earth!) A more everyday application is found in automobile taillights. Part of the plastic making up the taillight is formed into many tiny cube corners (Fig. 35.8b) so that headlight beams from cars approaching from the rear are reflected back to the drivers. Instead of cube corners, small spherical bumps are sometimes used (Fig. 35.8c). Tiny clear spheres are used in a coating material found on many road signs. Due to retroreflection from these spheres, the stop sign in Figure 35.8d appears much brighter than it would if it were simply a flat, shiny surface. Retroreflectors are also used for reflective panels on running shoes and running clothing to allow joggers to be seen at night.

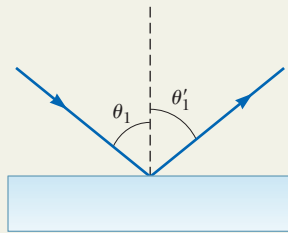
Another practical application of the law of reflection is the digital projection of movies, television shows, and computer presentations. A digital projector uses an optical semiconductor chip called a *digital micromirror device*. This device contains an array of tiny mirrors (Fig. 35.9a) that can be individually tilted by means of signals to an address electrode underneath the edge of the mirror. Each mirror corresponds to a pixel in the projected image. When the pixel corresponding to a given mirror is to be bright, the mirror is in the “on” position and is oriented so as to reflect light from a source illuminating the array to the screen (Fig. 35.9b). When the pixel for this mirror is to be dark, the mirror is “off” and is tilted so that the light is reflected away from the screen. The bright-

ness of the pixel is determined by the total time interval during which the mirror is in the “on” position during the display of one image.

Digital movie projectors use three micromirror devices, one for each of the primary colors red, blue, and green, so that movies can be displayed with up to 35 trillion colors. Because information is stored as binary data, a digital movie does not degrade with time as does film. Furthermore, because the movie is entirely in the form of computer software, it can be delivered to theaters by means of satellites, optical discs, or optical fiber networks.

Analysis Model Wave Under Reflection

Imagine a wave (electromagnetic or mechanical) traveling through space and striking a flat surface at an angle θ_1 with respect to the normal to the surface. The wave will reflect from the surface in a direction described by the **law of reflection**—the angle of reflection θ_1' equals the angle of incidence θ_1 :



$$\theta_1' = \theta_1 \quad (35.2)$$

Examples:

- sound waves from an orchestra reflect from a bandshell out to the audience
- a mirror is used to deflect a laser beam in a laser light show
- your bathroom mirror reflects light from your face back to you to form an image of your face (Chapter 36)
- x-rays reflected from a crystalline material create an optical pattern that can be used to understand the structure of the solid (Chapter 38)

35.5 Analysis Model: Wave Under Refraction

In addition to the phenomenon of reflection discussed for waves on strings in Section 16.4, we also found that some of the energy of the incident wave transmits into the new medium. For example, consider Figures 16.15 and 16.16, in which a pulse on a string approaching a junction with another string both reflects from and transmits past the junction and into the second string. Similarly, when a ray of light traveling through a transparent medium encounters a boundary leading into another transparent medium as shown in Figure 35.10, part of the energy is reflected and part enters the second medium. As with reflection, the direction of the transmitted wave exhibits an interesting behavior because of the three-dimensional nature of the light waves. The ray that enters the second medium changes its direction of propagation at the boundary and is said to be **refracted**. The incident ray, the reflected ray, and the refracted ray all lie in the same plane. The **angle of refraction**, θ_2 in Figure 35.10a, depends on the properties of the two media and on the angle of incidence θ_1 through the relationship

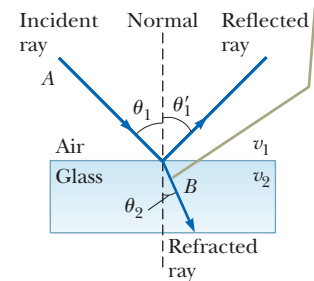
$$\frac{\sin \theta_2}{\sin \theta_1} = \frac{v_2}{v_1} \quad (35.3)$$

where v_1 is the speed of light in the first medium and v_2 is the speed of light in the second medium.


The path of a light ray through a refracting surface is reversible. For example, the ray shown in Figure 35.10a travels from point A to point B . If the ray originated at B , it would travel along line BA to reach point A and the reflected ray would point downward and to the left in the glass.

- Quick Quiz 35.2** If beam ① is the incoming beam in Figure 35.10b, which of the other four red lines are reflected beams and which are refracted beams?

All rays and the normal lie in the same plane, and the refracted ray is bent toward the normal because $v_2 < v_1$.



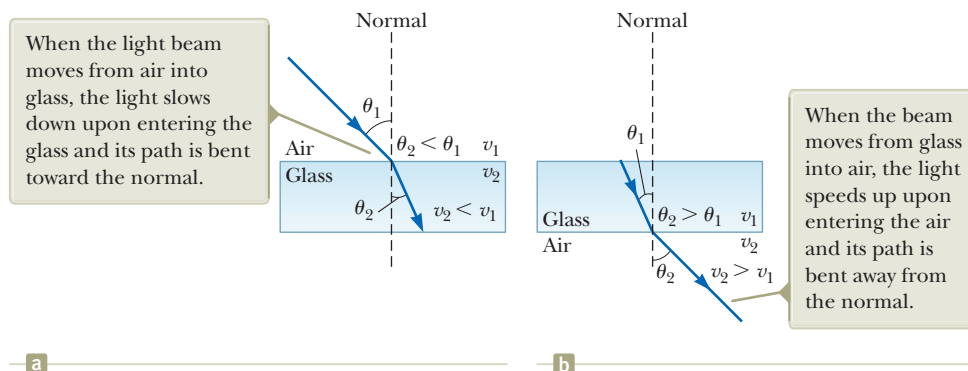
a



b

Figure 35.10 (a) The wave under refraction model. (b) Light incident on the Lucite block refracts both when it enters the block and when it leaves the block.

Figure 35.11 The refraction of light as it (a) moves from air into glass and (b) moves from glass into air.



From Equation 35.3, we can infer that when light moves from a material in which its speed is high to a material in which its speed is lower as shown in Figure 35.11a, the angle of refraction θ_2 is less than the angle of incidence θ_1 and the ray is bent *toward* the normal. If the ray moves from a material in which light moves slowly to a material in which it moves more rapidly as illustrated in Figure 35.11b, then θ_2 is greater than θ_1 and the ray is bent *away* from the normal.

The behavior of light as it passes from air into another substance and then re-emerges into air is often a source of confusion to students. When light travels in air, its speed is 3.00×10^8 m/s, but this speed is reduced to approximately 2×10^8 m/s when the light enters a block of glass. When the light re-emerges into air, its speed instantaneously increases to its original value of 3.00×10^8 m/s. This effect is far different from what happens, for example, when a bullet is fired through a block of wood. In that case, the speed of the bullet decreases as it moves through the wood because some of its original energy is used to tear apart the wood fibers. When the bullet enters the air once again, it emerges at a speed lower than it had when it entered the wood.

To see why light behaves as it does, consider Figure 35.12, which represents a beam of light entering a piece of glass from the left. Once inside the glass, the light may encounter an electron bound to an atom, indicated as point A. Let's assume light is absorbed by the atom, which causes the electron to oscillate (a detail represented by the double-headed vertical arrows). The oscillating electron then acts as an antenna and radiates the beam of light toward an atom at B, where the light is again absorbed. The details of these absorptions and radiations are best explained in terms of quantum mechanics (Chapter 42). For now, it is sufficient to think of light passing from one atom to another through the glass. Although light travels from one atom to another at 3.00×10^8 m/s, the absorption and radiation that take place cause the *average* light speed through the material to fall to approximately 2×10^8 m/s. Once the light emerges into the air, absorption and radiation cease and the light travels at a constant speed of 3.00×10^8 m/s.

A mechanical analog of refraction is shown in Figure 35.13. When the left end of the rolling barrel reaches the grass, it slows down, whereas the right end remains on the concrete and moves at its original speed. This difference in speeds causes the barrel to pivot, which changes the direction of travel.

Index of Refraction

In general, the speed of light in any material is *less* than its speed in vacuum. In fact, *light travels at its maximum speed c in vacuum*. It is convenient to define the **index of refraction** n of a medium to be the ratio

$$n \equiv \frac{\text{speed of light in vacuum}}{\text{speed of light in a medium}} \equiv \frac{c}{v} \quad (35.4)$$

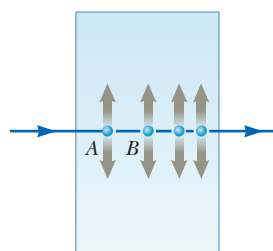
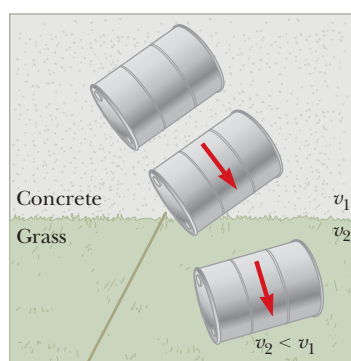


Figure 35.12 Light passing from one atom to another in a medium. The blue spheres are electrons, and the vertical arrows represent their oscillations.



This end slows first; as a result, the barrel turns.

Figure 35.13 Overhead view of a barrel rolling from concrete onto grass.

Index of refraction ►

This definition shows that the index of refraction is a dimensionless number greater than unity because v is always less than c . Furthermore, n is equal to unity for vacuum. The indices of refraction for various substances are listed in Table 35.1.

As light travels from one medium to another, its frequency does not change but its wavelength does. To see why that is true, consider Figure 35.14. Waves pass an observer at point A in medium 1 with a certain frequency and are incident on the boundary between medium 1 and medium 2. The frequency with which the waves pass an observer at point B in medium 2 must equal the frequency at which they pass point A . If that were not the case, energy would be piling up or disappearing at the boundary. Because there is no mechanism for that to occur, the frequency must be a constant as a light ray passes from one medium into another. Therefore, because the relationship $v = \lambda f$ (Eq. 16.12) from the traveling wave model must be valid in both media and because $f_1 = f_2 = f$, we see that

$$v_1 = \lambda_1 f \quad \text{and} \quad v_2 = \lambda_2 f \quad (35.5)$$

Because $v_1 \neq v_2$, it follows that $\lambda_1 \neq \lambda_2$ as shown in Figure 35.14.

We can obtain a relationship between index of refraction and wavelength by dividing the first Equation 35.5 by the second and then using Equation 35.4:

$$\frac{\lambda_1}{\lambda_2} = \frac{v_1}{v_2} = \frac{c/n_1}{c/n_2} = \frac{n_2}{n_1} \quad (35.6)$$

This expression gives

$$\lambda_1 n_1 = \lambda_2 n_2$$

If medium 1 is vacuum or, for all practical purposes, air, then $n_1 = 1$. Hence, it follows from Equation 35.6 that the index of refraction of any medium can be expressed as the ratio

$$n = \frac{\lambda}{\lambda_n} \quad (35.7)$$

where λ is the wavelength of light in vacuum and λ_n is the wavelength of light in the medium whose index of refraction is n . From Equation 35.7, we see that because $n > 1$, $\lambda_n < \lambda$.

We are now in a position to express Equation 35.3 in an alternative form. Replacing the v_2/v_1 term in Equation 35.3 with n_1/n_2 from Equation 35.6 gives

$$n_1 \sin \theta_1 = n_2 \sin \theta_2 \quad (35.8)$$

The experimental discovery of this relationship is usually credited to Willebrord Snell (1591–1626) and it is therefore known as **Snell's law of refraction**. We shall

Table 35.1 Indices of Refraction

Substance	Index of Refraction	Substance	Index of Refraction
<i>Solids at 20°C</i>		<i>Liquids at 20°C</i>	
Cubic zirconia	2.20	Benzene	1.501
Diamond (C)	2.419	Carbon disulfide	1.628
Fluorite (CaF ₂)	1.434	Carbon tetrachloride	1.461
Fused quartz (SiO ₂)	1.458	Ethyl alcohol	1.361
Gallium phosphide	3.50	Glycerin	1.473
Glass, crown	1.52	Water	1.333
Glass, flint	1.66		
Ice (H ₂ O)	1.309	<i>Gases at 0°C, 1 atm</i>	
Polystyrene	1.49	Air	1.000 293
Sodium chloride (NaCl)	1.544	Carbon dioxide	1.000 45

Note: All values are for light having a wavelength of 589 nm in vacuum.

As a wave moves between the media, its wavelength changes but its frequency remains constant.

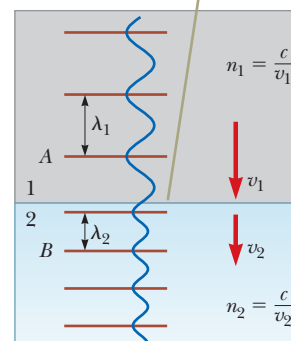


Figure 35.14 A wave travels from medium 1 to medium 2, in which it moves with lower speed.

Pitfall Prevention 35.2

An Inverse Relationship The index of refraction is *inversely* proportional to the wave speed. As the wave speed v decreases, the index of refraction n increases. Therefore, the higher the index of refraction of a material, the more it *slows down* light from its speed in vacuum. The more the light slows down, the more θ_2 differs from θ_1 in Equation 35.8.

◀ Snell's law of refraction

Pitfall Prevention 35.3

n Is Not an Integer Here The symbol n has been used several times as an integer, such as in Chapter 18 to indicate the standing wave mode on a string or in an air column. The index of refraction n is *not* an integer.

examine this equation further in Section 35.6. Refraction of waves at an interface between two media is a common phenomenon, so we identify an analysis model for this situation: the **wave under refraction**. Equation 35.8 is the mathematical representation of this model for electromagnetic radiation. Other waves, such as seismic waves and sound waves, also exhibit refraction according to this model, and the mathematical representation of the model for these waves is Equation 35.3.

- Quick Quiz 35.3** Light passes from a material with index of refraction 1.3 into one with index of refraction 1.2. Compared to the incident ray, what happens to the refracted ray? (a) It bends toward the normal. (b) It is undeflected. (c) It bends away from the normal.

Analysis Model Wave Under Refraction

Imagine a wave (electromagnetic or mechanical) traveling through space and striking a flat surface at an angle θ_1 with respect to the normal to the surface. Some of the energy of the wave refracts into the medium below the surface in a direction θ_2 described by the **law of refraction**—

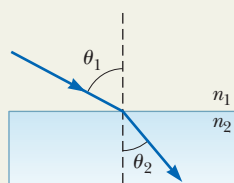
$$\frac{\sin \theta_2}{\sin \theta_1} = \frac{v_2}{v_1} \quad (35.3)$$

where v_1 and v_2 are the speeds of the wave in medium 1 and medium 2, respectively.

For light waves, **Snell's law of refraction** states that

$$n_1 \sin \theta_1 = n_2 \sin \theta_2 \quad (35.8)$$

where n_1 and n_2 are the indices of refraction in the two media.



Examples:

- sound waves moving upward from the shore of a lake refract in warmer layers of air higher above the lake and travel downward to a listener in a boat, making sounds from the shore louder than expected
- light from the sky approaches a hot roadway at a grazing angle and refracts upward so as to miss the roadway and enter a driver's eye, giving the illusion of a pool of water on the distant roadway
- light is sent over long distances in an optical fiber because of a difference in index of refraction between the fiber and the surrounding material (Section 35.8)
- a magnifying glass forms an enlarged image of a postage stamp due to refraction of light through the lens (Chapter 36)

Example 35.3 Angle of Refraction for Glass **AM**

A light ray of wavelength 589 nm traveling through air is incident on a smooth, flat slab of crown glass at an angle of 30.0° to the normal.

(A) Find the angle of refraction.

SOLUTION

Conceptualize Study Figure 35.11a, which illustrates the refraction process occurring in this problem. We expect that $\theta_2 < \theta_1$ because the speed of light is lower in the glass.

Categorize This is a typical problem in which we apply the *wave under refraction* model.

Analyze Rearrange Snell's law of refraction to find $\sin \theta_2$:

$$\sin \theta_2 = \frac{n_1}{n_2} \sin \theta_1$$

Solve for θ_2 :

$$\theta_2 = \sin^{-1} \left(\frac{n_1}{n_2} \sin \theta_1 \right)$$

Substitute indices of refraction from Table 35.1 and the incident angle:

$$\theta_2 = \sin^{-1} \left(\frac{1.00}{1.52} \sin 30.0^\circ \right) = 19.2^\circ$$

(B) Find the speed of this light once it enters the glass.

35.3 continued

SOLUTION

Solve Equation 35.4 for the speed of light in the glass:

$$v = \frac{c}{n}$$

Substitute numerical values:

$$v = \frac{3.00 \times 10^8 \text{ m/s}}{1.52} = 1.97 \times 10^8 \text{ m/s}$$

(C) What is the wavelength of this light in the glass?

SOLUTION

Use Equation 35.7 to find the wavelength in the glass:

$$\lambda_n = \frac{\lambda}{n} = \frac{589 \text{ nm}}{1.52} = 388 \text{ nm}$$

Finalize In part (A), note that $\theta_2 < \theta_1$, consistent with the slower speed of the light found in part (B). In part (C), we see that the wavelength of the light is shorter in the glass than in the air.

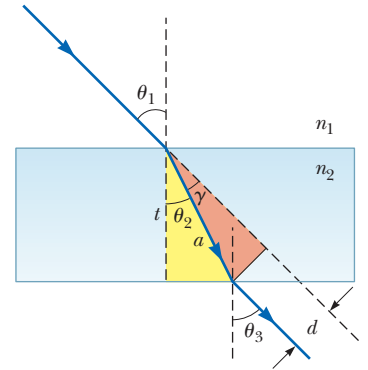
Example 35.4 Light Passing Through a Slab AM

A light beam passes from medium 1 to medium 2, with the latter medium being a thick slab of material whose index of refraction is n_2 (Fig. 35.15). Show that the beam emerging into medium 1 from the other side is parallel to the incident beam.

SOLUTION

Conceptualize Follow the path of the light beam as it enters and exits the slab of material in Figure 35.15, where we have assumed that $n_2 > n_1$. The ray bends toward the normal upon entering and away from the normal upon leaving.

Figure 35.15 (Example 35.4) The dashed line drawn parallel to the ray coming out the bottom of the slab represents the path the light would take were the slab not there.



Categorize Like Example 35.3, this is another typical problem in which we apply the *wave under refraction* model.

Analyze Apply Snell's law of refraction to the upper surface: (1) $\sin \theta_2 = \frac{n_1}{n_2} \sin \theta_1$

Apply Snell's law to the lower surface: (2) $\sin \theta_3 = \frac{n_2}{n_1} \sin \theta_2$

Substitute Equation (1) into Equation (2): $\sin \theta_3 = \frac{n_2}{n_1} \left(\frac{n_1}{n_2} \sin \theta_1 \right) = \sin \theta_1$

Finalize Therefore, $\theta_3 = \theta_1$ and the slab does not alter the direction of the beam. It does, however, offset the beam parallel to itself by the distance d shown in Figure 35.15.

WHAT IF? What if the thickness t of the slab is doubled? Does the offset distance d also double?

Answer Consider the region of the light path within the slab in Figure 35.15. The distance a is the hypotenuse of two right triangles.

Find an expression for a from the yellow triangle: $a = \frac{t}{\cos \theta_2}$

Find an expression for d from the red triangle: $d = a \sin \gamma = a \sin (\theta_1 - \theta_2)$

Combine these equations: $d = \frac{t}{\cos \theta_2} \sin (\theta_1 - \theta_2)$

For a given incident angle θ_1 , the refracted angle θ_2 is determined solely by the index of refraction, so the offset distance d is proportional to t . If the thickness doubles, so does the offset distance.

The apex angle Φ is the angle between the sides of the prism through which the light enters and leaves.

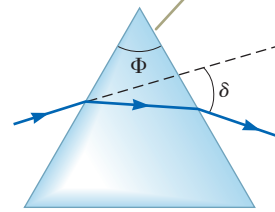


Figure 35.16 A prism refracts a single-wavelength light ray through an angle of deviation δ .

In Example 35.4, the light passes through a slab of material with parallel sides. What happens when light strikes a prism with nonparallel sides as shown in Figure 35.16? In this case, the outgoing ray does not propagate in the same direction as the incoming ray. A ray of single-wavelength light incident on the prism from the left emerges at angle δ from its original direction of travel. This angle δ is called the **angle of deviation**. The **apex angle** Φ of the prism, shown in the figure, is defined as the angle between the surface at which the light enters the prism and the second surface that the light encounters.

Example 35.5 Measuring n Using a Prism **AM**

Although we do not prove it here, the minimum angle of deviation δ_{\min} for a prism occurs when the angle of incidence θ_1 is such that the refracted ray inside the prism makes the same angle with the normal to the two prism faces¹ as shown in Figure 35.17. Obtain an expression for the index of refraction of the prism material in terms of the minimum angle of deviation and the apex angle Φ .

SOLUTION

Conceptualize Study Figure 35.17 carefully and be sure you understand why the light ray comes out of the prism traveling in a different direction.

Categorize In this example, light enters a material through one surface and leaves the material at another surface. Let's apply the *wave under refraction* model to the light passing through the prism.

Analyze Consider the geometry in Figure 35.17, where we have used symmetry to label several angles. The reproduction of the angle $\Phi/2$ at the location of the incoming light ray shows that $\theta_2 = \Phi/2$. The theorem that an exterior angle of any triangle equals the sum of the two opposite interior angles shows that $\delta_{\min} = 2\alpha$. The geometry also shows that $\theta_1 = \theta_2 + \alpha$.

Combine these three geometric results:

$$\theta_1 = \theta_2 + \alpha = \frac{\Phi}{2} + \frac{\delta_{\min}}{2} = \frac{\Phi + \delta_{\min}}{2}$$

Apply the wave under refraction model at the left surface and solve for n :

$$(1.00) \sin \theta_1 = n \sin \theta_2 \rightarrow n = \frac{\sin \theta_1}{\sin \theta_2}$$

Substitute for the incident and refracted angles:

$$n = \frac{\sin \left(\frac{\Phi + \delta_{\min}}{2} \right)}{\sin (\Phi/2)} \quad (35.9)$$

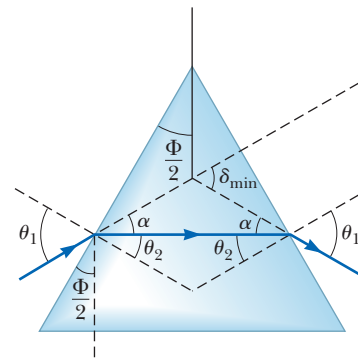


Figure 35.17 (Example 35.5) A light ray passing through a prism at the minimum angle of deviation δ_{\min} .

¹The details of this proof are available in texts on optics.

35.5 continued

Finalize Knowing the apex angle Φ of the prism and measuring δ_{\min} , you can calculate the index of refraction of the prism material. Furthermore, a hollow prism can be used to determine the values of n for various liquids filling the prism.

35.6 Huygens's Principle

The laws of reflection and refraction were stated earlier in this chapter without proof. In this section, we develop these laws by using a geometric method proposed by Huygens in 1678. **Huygens's principle** is a geometric construction for using knowledge of an earlier wave front to determine the position of a new wave front at some instant:

All points on a given wave front are taken as point sources for the production of spherical secondary waves, called wavelets, that propagate outward through a medium with speeds characteristic of waves in that medium. After some time interval has passed, the new position of the wave front is the surface tangent to the wavelets.

First, consider a plane wave moving through free space as shown in Figure 35.18a. At $t = 0$, the wave front is indicated by the plane labeled AA' . In Huygens's construction, each point on this wave front is considered a point source. For clarity, only three point sources on AA' are shown. With these sources for the wavelets, we draw circular arcs, each of radius $c\Delta t$, where c is the speed of light in vacuum and Δt is some time interval during which the wave propagates. The surface drawn tangent to these wavelets is the plane BB' , which is the wave front at a later time, and is parallel to AA' . In a similar manner, Figure 35.18b shows Huygens's construction for a spherical wave.

Huygens's Principle Applied to Reflection and Refraction

We now derive the laws of reflection and refraction, using Huygens's principle.

For the law of reflection, refer to Figure 35.19. The line AB represents a plane wave front of the incident light just as ray 1 strikes the surface. At this instant, the wave at A sends out a Huygens wavelet (appearing at a later time as the light brown circular arc passing through D); the reflected light makes an angle γ' with the surface. At the

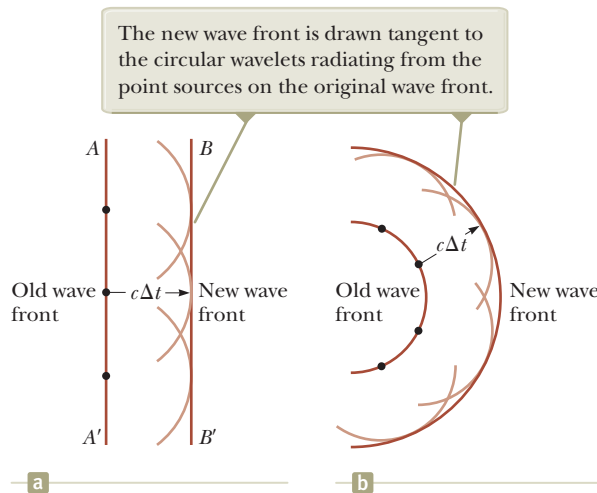


Figure 35.18 Huygens's construction for (a) a plane wave propagating to the right and (b) a spherical wave propagating to the right.

Pitfall Prevention 35.4

Of What Use Is Huygens's Principle? At this point, the importance of Huygens's principle may not be evident. Predicting the position of a future wave front may not seem to be very critical. We will use Huygens's principle here to generate the laws of reflection and refraction and in later chapters to explain additional wave phenomena for light.

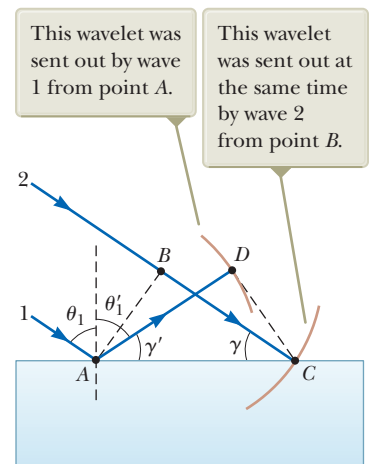


Figure 35.19 Huygens's construction for proving the law of reflection.

same time, the wave at B emits a Huygens wavelet (the light brown circular arc passing through C) with the incident light making an angle γ with the surface. Figure 35.19 shows these wavelets after a time interval Δt , after which ray 2 strikes the surface. Because both rays 1 and 2 move with the same speed, we must have $AD = BC = c \Delta t$.

The remainder of our analysis depends on geometry. Notice that the two triangles ABC and ADC are congruent because they have the same hypotenuse AC and because $AD = BC$. Figure 35.19 shows that

$$\cos \gamma = \frac{BC}{AC} \quad \text{and} \quad \cos \gamma' = \frac{AD}{AC}$$

where $\gamma = 90^\circ - \theta_1$ and $\gamma' = 90^\circ - \theta_1'$. Because $AD = BC$,

$$\cos \gamma = \cos \gamma'$$

Therefore,

$$\gamma = \gamma'$$

$$90^\circ - \theta_1 = 90^\circ - \theta_1'$$

and

$$\theta_1 = \theta_1'$$

which is the law of reflection.

Now let's use Huygens's principle to derive Snell's law of refraction. We focus our attention on the instant ray 1 strikes the surface and the subsequent time interval until ray 2 strikes the surface as in Figure 35.20. During this time interval, the wave at A sends out a Huygens wavelet (the light brown arc passing through D) and the light refracts into the material, making an angle θ_2 with the normal to the surface. In the same time interval, the wave at B sends out a Huygens wavelet (the light brown arc passing through C) and the light continues to propagate in the same direction. Because these two wavelets travel through different media, the radii of the wavelets are different. The radius of the wavelet from A is $AD = v_2 \Delta t$, where v_2 is the wave speed in the second medium. The radius of the wavelet from B is $BC = v_1 \Delta t$, where v_1 is the wave speed in the original medium.

From triangles ABC and ADC , we find that

$$\sin \theta_1 = \frac{BC}{AC} = \frac{v_1 \Delta t}{AC} \quad \text{and} \quad \sin \theta_2 = \frac{AD}{AC} = \frac{v_2 \Delta t}{AC}$$

Dividing the first equation by the second gives

$$\frac{\sin \theta_1}{\sin \theta_2} = \frac{v_1}{v_2}$$

From Equation 35.4, however, we know that $v_1 = c/n_1$ and $v_2 = c/n_2$. Therefore,

$$\frac{\sin \theta_1}{\sin \theta_2} = \frac{c/n_1}{c/n_2} = \frac{n_2}{n_1}$$

and

$$n_1 \sin \theta_1 = n_2 \sin \theta_2$$

which is Snell's law of refraction.

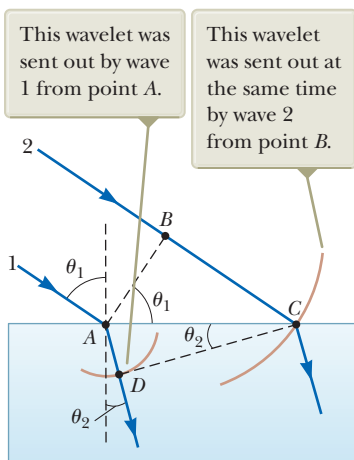


Figure 35.20 Huygens's construction for proving Snell's law of refraction.

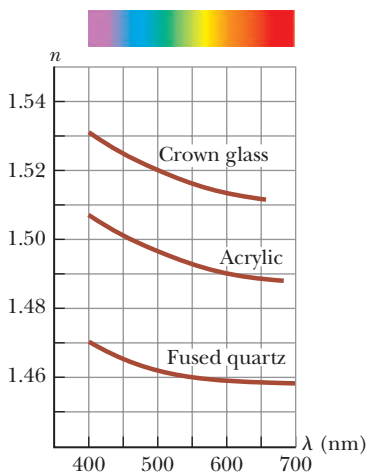


Figure 35.21 Variation of index of refraction with vacuum wavelength for three materials.

35.7 Dispersion

An important property of the index of refraction n is that, for a given material, the index varies with the wavelength of the light passing through the material as Figure 35.21 shows. This behavior is called **dispersion**. Because n is a function of wavelength, Snell's law of refraction indicates that light of different wavelengths is refracted at different angles when incident on a material.




Figure 35.22 White light enters a glass prism at the upper left.

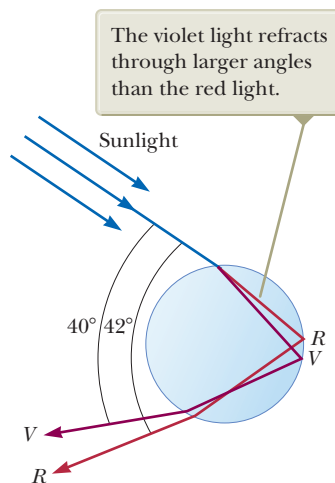


Figure 35.23 Path of sunlight through a spherical raindrop. Light following this path contributes to the visible rainbow.

Figure 35.21 shows that the index of refraction generally decreases with increasing wavelength. For example, violet light refracts more than red light does when passing into a material.

Now suppose a beam of *white light* (a combination of all visible wavelengths) is incident on a prism as illustrated in Figure 35.22. Clearly, the angle of deviation δ depends on wavelength. The rays that emerge spread out in a series of colors known as the **visible spectrum**. These colors, in order of decreasing wavelength, are red, orange, yellow, green, blue, and violet. Newton showed that each color has a particular angle of deviation and that the colors can be recombined to form the original white light.

The dispersion of light into a spectrum is demonstrated most vividly in nature by the formation of a rainbow, which is often seen by an observer positioned between the Sun and a rain shower. To understand how a rainbow is formed, consider Figure 35.23. We will need to apply both the wave under reflection and wave under refraction models. A ray of sunlight (which is white light) passing overhead strikes a drop of water in the atmosphere and is refracted and reflected as follows. It is first refracted at the front surface of the drop, with the violet light deviating the most and the red light the least. At the back surface of the drop, the light is reflected and returns to the front surface, where it again undergoes refraction as it moves from water into air. The rays leave the drop such that the angle between the incident white light and the most intense returning violet ray is 40° and the angle between the incident white light and the most intense returning red ray is 42° . This small angular difference between the returning rays causes us to see a colored bow.

Now suppose an observer is viewing a rainbow as shown in Figure 35.24. If a raindrop high in the sky is being observed, the most intense red light returning from the drop reaches the observer because it is deviated the least; the most intense violet light, however, passes over the observer because it is deviated the most. Hence, the observer sees red light coming from this drop. Similarly, a drop lower in the sky directs the most intense violet light toward the observer and appears violet to the observer. (The most intense red light from this drop passes below the observer's eye and is not seen.) The most intense light from other colors of the spectrum reaches the observer from raindrops lying between these two extreme positions.

Figure 35.25 (page 1074) shows a *double rainbow*. The secondary rainbow is fainter than the primary rainbow, and the colors are reversed. The secondary rainbow arises from light that makes two reflections from the interior surface before exiting

Pitfall Prevention 35.5

A Rainbow of Many Light Rays

Pictorial representations such as Figure 35.23 are subject to misinterpretation. The figure shows one ray of light entering the raindrop and undergoing reflection and refraction, exiting the raindrop in a range of 40° to 42° from the entering ray. This illustration might be interpreted incorrectly as meaning that *all* light entering the raindrop exits in this small range of angles. In reality, light exits the raindrop over a much larger range of angles, from 0° to 42° . A careful analysis of the reflection and refraction from the spherical raindrop shows that the range of 40° to 42° is where the *highest-intensity light* exits the raindrop.

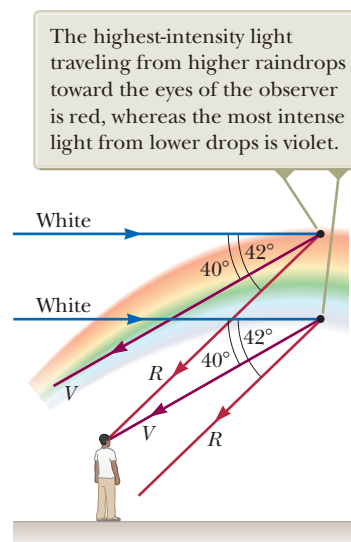


Figure 35.24 The formation of a rainbow seen by an observer standing with the Sun behind his back.



Mark D. Phillips/Photo Researchers, Inc.

Figure 35.25 This photograph of a rainbow shows a distinct secondary rainbow with the colors reversed.

the raindrop. In the laboratory, rainbows have been observed in which the light makes more than 30 reflections before exiting the water drop. Because each reflection involves some loss of light due to refraction of part of the incident light out of the water drop, the intensity of these higher-order rainbows is small compared with that of the primary rainbow.

Quick Quiz 35.4 In photography, lenses in a camera use refraction to form an image on a light-sensitive surface. Ideally, you want all the colors in the light from the object being photographed to be refracted by the same amount. Of the materials shown in Figure 35.21, which would you choose for a single-element camera lens? (a) crown glass (b) acrylic (c) fused quartz (d) impossible to determine

35.8 Total Internal Reflection

An interesting effect called **total internal reflection** can occur when light is directed from a medium having a given index of refraction toward one having a lower index of refraction. Consider Figure 35.26a, in which a light ray travels in medium 1 and meets the boundary between medium 1 and medium 2, where n_1 is greater than n_2 . In the figure, labels 1 through 5 indicate various possible directions of the ray consistent with the wave under refraction model. The refracted rays are bent away from the normal because n_1 is greater than n_2 . At some particular angle of incidence θ_c , called the **critical angle**, the refracted light ray moves parallel to the boundary so that $\theta_2 = 90^\circ$ (Fig. 35.26b). For angles of incidence greater than θ_c , the ray is entirely reflected at the boundary as shown by ray 5 in Figure 35.26a.

We can use Snell's law of refraction to find the critical angle. When $\theta_1 = \theta_c$, $\theta_2 = 90^\circ$ and Equation 35.8 gives

$$n_1 \sin \theta_c = n_2 \sin 90^\circ = n_2$$

$$\sin \theta_c = \frac{n_2}{n_1} \quad (\text{for } n_1 > n_2) \quad (35.10)$$

Critical angle for total internal reflection ▶

This equation can be used only when n_1 is greater than n_2 . That is, total internal reflection occurs only when light is directed from a medium of a given index of refraction toward a medium of lower index of refraction. If n_1 were less than n_2 ,

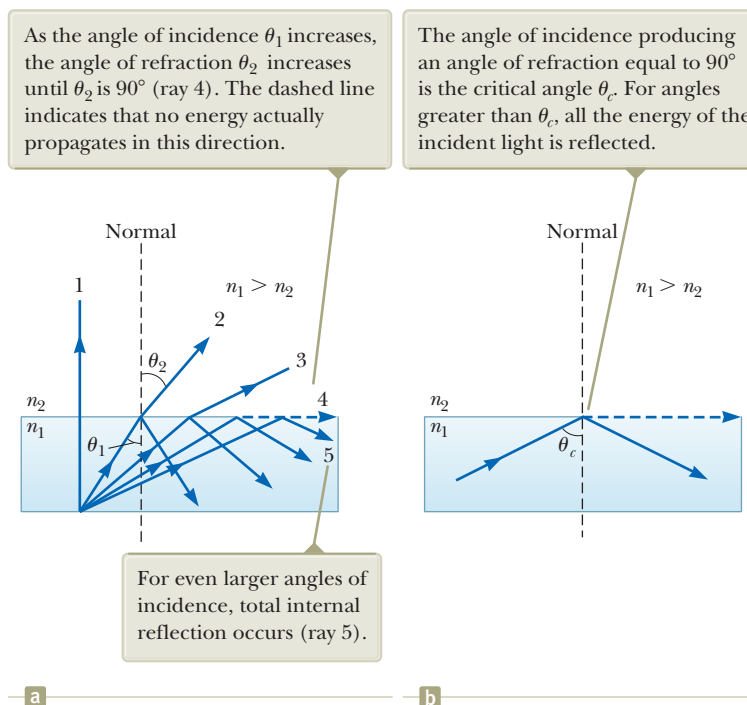



Figure 35.26 (a) Rays travel from a medium of index of refraction n_1 into a medium of index of refraction n_2 , where $n_2 < n_1$. (b) Ray 4 is singled out.

Equation 35.10 would give $\sin \theta_c > 1$, which is a meaningless result because the sine of an angle can never be greater than unity.

The critical angle for total internal reflection is small when n_1 is considerably greater than n_2 . For example, the critical angle for a diamond in air is 24° . Any ray inside the diamond that approaches the surface at an angle greater than 24° is completely reflected back into the crystal. This property, combined with proper faceting, causes diamonds to sparkle. The angles of the facets are cut so that light is “caught” inside the crystal through multiple internal reflections. These multiple reflections give the light a long path through the medium, and substantial dispersion of colors occurs. By the time the light exits through the top surface of the crystal, the rays associated with different colors have been fairly widely separated from one another.

Cubic zirconia also has a high index of refraction and can be made to sparkle very much like a diamond. If a suspect jewel is immersed in corn syrup, the difference in n for the cubic zirconia and that for the corn syrup is small and the critical angle is therefore great. Hence, more rays escape sooner; as a result, the sparkle completely disappears. A real diamond does not lose all its sparkle when placed in corn syrup.

- Quick Quiz 35.5** In Figure 35.27, five light rays enter a glass prism from the left.
- (i) How many of these rays undergo total internal reflection at the slanted surface of the prism? (a) one (b) two (c) three (d) four (e) five
 - (ii) Suppose the prism in Figure 35.27 can be rotated in the plane of the paper. For *all five* rays to experience total internal reflection from the slanted surface, should the prism be rotated (a) clockwise or (b) counterclockwise?



Courtesy of Henry Leap and Jim Lehman

Figure 35.27 (Quick Quiz 35.5) Five nonparallel light rays enter a glass prism from the left.

Example 35.6

A View from the Fish's Eye

Find the critical angle for an air–water boundary. (Assume the index of refraction of water is 1.33.)

SOLUTION

Conceptualize Study Figure 35.26 to understand the concept of total internal reflection and the significance of the critical angle.

Categorize We use concepts developed in this section, so we categorize this example as a substitution problem.

Apply Equation 35.10 to the air–water interface:

$$\sin \theta_c = \frac{n_2}{n_1} = \frac{1.00}{1.33} = 0.752$$

$$\theta_c = 48.8^\circ$$

WHAT IF? What if a fish in a still pond looks upward toward the water's surface at different angles relative to the surface as in Figure 35.28? What does it see?

Answer Because the path of a light ray is reversible, light traveling from medium 2 into medium 1 in Figure 35.26a follows the paths shown, but in the *opposite* direction. A fish looking upward toward the water surface as in Figure 35.28 can see out of the water if it looks toward the surface at an angle less than the critical angle. Therefore, when the fish's line of vision makes an angle of $\theta = 40^\circ$ with the normal to the surface, for example, light from above the water reaches the fish's eye. At $\theta = 48.8^\circ$, the critical angle for water, the light has to skim along the water's surface before being refracted to the fish's eye; at this angle, the fish can, in principle, see the entire shore of the pond. At angles greater than the critical angle, the light reaching the fish comes by means of total internal reflection at the surface. Therefore, at $\theta = 60^\circ$, the fish sees a reflection of the bottom of the pond.

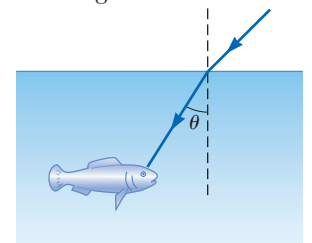


Figure 35.28 (Example 35.6) **What If?** A fish looks upward toward the water surface.

Optical Fibers

Another interesting application of total internal reflection is the use of glass or transparent plastic rods to “pipe” light from one place to another. As indicated in Figure 35.29 (page 1076), light is confined to traveling within a rod, even around curves, as the result of successive total internal reflections. Such a light pipe is flexible

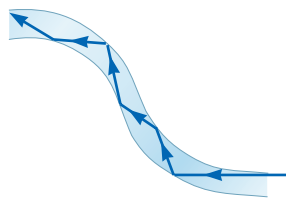


Figure 35.29 Light travels in a curved transparent rod by multiple internal reflections.

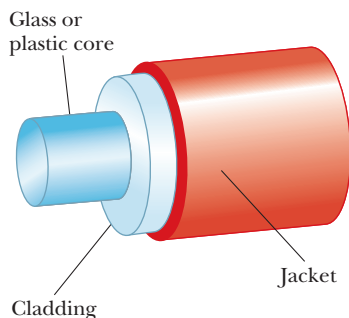


Figure 35.30 The construction of an optical fiber. Light travels in the core, which is surrounded by a cladding and a protective jacket.

if thin fibers are used rather than thick rods. A flexible light pipe is called an **optical fiber**. If a bundle of parallel fibers is used to construct an optical transmission line, images can be transferred from one point to another. Part of the 2009 Nobel Prize in Physics was awarded to Charles K. Kao (b. 1933) for his discovery of how to transmit light signals over long distances through thin glass fibers. This discovery has led to the development of a sizable industry known as *fiber optics*.

A practical optical fiber consists of a transparent core surrounded by a *cladding*, a material that has a lower index of refraction than the core. The combination may be surrounded by a plastic *jacket* to prevent mechanical damage. Figure 35.30 shows a cutaway view of this construction. Because the index of refraction of the cladding is less than that of the core, light traveling in the core experiences total internal reflection if it arrives at the interface between the core and the cladding at an angle of incidence that exceeds the critical angle. In this case, light “bounces” along the core of the optical fiber, losing very little of its intensity as it travels.

Any loss in intensity in an optical fiber is essentially due to reflections from the two ends and absorption by the fiber material. Optical fiber devices are particularly useful for viewing an object at an inaccessible location. For example, physicians often use such devices to examine internal organs of the body or to perform surgery without making large incisions. Optical fiber cables are replacing copper wiring and coaxial cables for telecommunications because the fibers can carry a much greater volume of telephone calls or other forms of communication than electrical wires can.

Figure 35.31a shows a bundle of optical fibers gathered into an optical cable that can be used to carry communication signals. Figure 35.31b shows laser light following the curves of a coiled bundle by total internal reflection. Many computers and other electronic equipment now have optical ports as well as electrical ports for transferring information.

Figure 35.31 (a) Strands of glass optical fibers are used to carry voice, video, and data signals in telecommunication networks. (b) A bundle of optical fibers is illuminated by a laser.



Summary

Definition

The **index of refraction** n of a medium is defined by the ratio

$$n \equiv \frac{c}{v} \quad (35.4)$$

where c is the speed of light in vacuum and v is the speed of light in the medium.

Concepts and Principles

In geometric optics, we use the **ray approximation**, in which a wave travels through a uniform medium in straight lines in the direction of the rays.

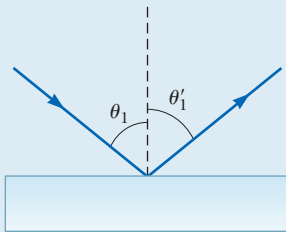
Total internal reflection occurs when light travels from a medium of high index of refraction to one of lower index of refraction. The **critical angle** θ_c for which total internal reflection occurs at an interface is given by

$$\sin \theta_c = \frac{n_2}{n_1} \quad (\text{for } n_1 > n_2) \quad (35.10)$$

Analysis Models for Problem Solving

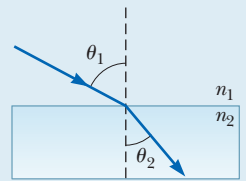
Wave Under Reflection. The **law of reflection** states that for a light ray (or other type of wave) incident on a smooth surface, the angle of reflection θ'_1 equals the angle of incidence θ_1 :

$$\theta'_1 = \theta_1 \quad (35.2)$$



Wave Under Refraction. A wave crossing a boundary as it travels from medium 1 to medium 2 is **refracted**. The angle of refraction θ_2 is related to the incident angle θ_1 by the relationship

$$\frac{\sin \theta_2}{\sin \theta_1} = \frac{v_2}{v_1} \quad (35.3)$$



where v_1 and v_2 are the speeds of the wave in medium 1 and medium 2, respectively. The incident ray, the reflected ray, the refracted ray, and the normal to the surface all lie in the same plane.

For light waves, **Snell's law of refraction** states that

$$n_1 \sin \theta_1 = n_2 \sin \theta_2 \quad (35.8)$$

where n_1 and n_2 are the indices of refraction in the two media.

Objective Questions

1. denotes answer available in *Student Solutions Manual/Study Guide*

- In each of the following situations, a wave passes through an opening in an absorbing wall. Rank the situations in order from the one in which the wave is best described by the ray approximation to the one in which the wave coming through the opening spreads out most nearly equally in all directions in the hemisphere beyond the wall. (a) The sound of a low whistle at 1 kHz passes through a doorway 1 m wide. (b) Red light passes through the pupil of your eye. (c) Blue light passes through the pupil of your eye. (d) The wave broadcast by an AM radio station passes through a doorway 1 m wide. (e) An x-ray passes through the space between bones in your elbow joint.
- A source emits monochromatic light of wavelength 495 nm in air. When the light passes through a liquid, its wavelength reduces to 434 nm. What is the liquid's index of refraction? (a) 1.26 (b) 1.49 (c) 1.14 (d) 1.33 (e) 2.03
- Carbon disulfide ($n = 1.63$) is poured into a container made of crown glass ($n = 1.52$). What is the critical angle for total internal reflection of a light ray in the liquid when it is incident on the liquid-to-glass surface? (a) 89.2° (b) 68.8° (c) 21.2° (d) 1.07° (e) 43.0°
- A light wave moves between medium 1 and medium 2. Which of the following are correct statements relating its speed, frequency, and wavelength in the two media, the indices of refraction of the media, and the angles of incidence and refraction? More than one statement may be correct. (a) $v_1/\sin \theta_1 = v_2/\sin \theta_2$ (b) $\csc \theta_1/n_1 = \csc \theta_2/n_2$ (c) $\lambda_1/\sin \theta_1 = \lambda_2/\sin \theta_2$ (d) $f_1/\sin \theta_1 = f_2/\sin \theta_2$ (e) $n_1/\cos \theta_1 = n_2/\cos \theta_2$
- What happens to a light wave when it travels from air into glass? (a) Its speed remains the same. (b) Its speed increases. (c) Its wavelength increases. (d) Its wavelength remains the same. (e) Its frequency remains the same.
- The index of refraction for water is about $\frac{4}{3}$. What happens as a beam of light travels from air into water? (a) Its speed increases to $\frac{4}{3}c$, and its frequency decreases. (b) Its speed decreases to $\frac{3}{4}c$, and its wavelength decreases by a factor of $\frac{3}{4}$. (c) Its speed decreases to $\frac{3}{4}c$, and its wavelength increases by a factor of $\frac{4}{3}$. (d) Its speed and frequency remain the same. (e) Its speed decreases to $\frac{3}{4}c$, and its frequency increases.
- Light can travel from air into water. Some possible paths for the light ray in the water are shown in Figure

OQ35.7. Which path will the light most likely follow?
(a) A (b) B (c) C (d) D (e) E

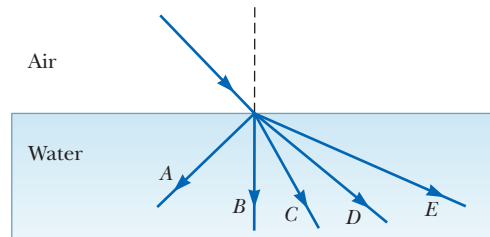


Figure OQ35.7

8. What is the order of magnitude of the time interval required for light to travel 10 km as in Galileo's attempt to measure the speed of light? (a) several seconds (b) several milliseconds (c) several microseconds (d) several nanoseconds
9. A light ray containing both blue and red wavelengths is incident at an angle on a slab of glass. Which of the sketches in Figure OQ35.9 represents the most likely outcome? (a) A (b) B (c) C (d) D (e) none of them

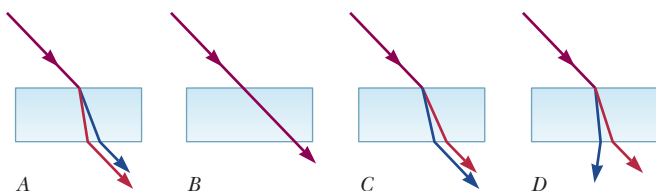


Figure OQ35.9

10. For the following questions, choose from the following possibilities: (a) yes; water (b) no; water (c) yes; air (d) no; air. (i) Can light undergo total internal reflection at a smooth interface between air and water? If so, in which medium must it be traveling originally? (ii) Can sound undergo total internal reflection at a

smooth interface between air and water? If so, in which medium must it be traveling originally?

11. A light ray travels from vacuum into a slab of material with index of refraction n_1 at incident angle θ with respect to the surface. It subsequently passes into a second slab of material with index of refraction n_2 before passing back into vacuum again. The surfaces of the different materials are all parallel to one another. As the light exits the second slab, what can be said of the final angle ϕ that the outgoing light makes with the normal? (a) $\phi > \theta$ (b) $\phi < \theta$ (c) $\phi = \theta$ (d) The angle depends on the magnitudes of n_1 and n_2 . (e) The angle depends on the wavelength of the light.
12. Suppose you find experimentally that two colors of light, A and B, originally traveling in the same direction in air, are sent through a glass prism, and A changes direction more than B. Which travels more slowly in the prism, A or B? Alternatively, is there insufficient information to determine which moves more slowly?
13. The core of an optical fiber transmits light with minimal loss if it is surrounded by what? (a) water (b) diamond (c) air (d) glass (e) fused quartz
14. Which color light refracts the most when entering crown glass from air at some incident angle θ with respect to the normal? (a) violet (b) blue (c) green (d) yellow (e) red
15. Light traveling in a medium of index of refraction n_1 is incident on another medium having an index of refraction n_2 . Under which of the following conditions can total internal reflection occur at the interface of the two media? (a) The indices of refraction have the relation $n_2 > n_1$. (b) The indices of refraction have the relation $n_1 > n_2$. (c) Light travels slower in the second medium than in the first. (d) The angle of incidence is less than the critical angle. (e) The angle of incidence must equal the angle of refraction.

Conceptual Questions

I. denotes answer available in *Student Solutions Manual/Study Guide*

- The level of water in a clear, colorless glass can easily be observed with the naked eye. The level of liquid helium in a clear glass vessel is extremely difficult to see with the naked eye. Explain.
- A complete circle of a rainbow can sometimes be seen from an airplane. With a stepladder, a lawn sprinkler, and a sunny day, how can you show the complete circle to children?
- You take a child for walks around the neighborhood. She loves to listen to echoes from houses when she shouts or when you clap loudly. A house with a large, flat front wall can produce an echo if you stand straight in front of it and reasonably far away. (a) Draw a bird's-eye view of the situation to explain the production of the echo. Shade the area where you can stand to hear the echo. For parts (b) through (e), explain your answers with diagrams. (b) **What If?** The

child helps you discover that a house with an L-shaped floor plan can produce echoes if you are standing in a wider range of locations. You can be standing at any reasonably distant location from which you can see the inside corner. Explain the echo in this case and compare with your diagram in part (a). (c) **What If?** What if the two wings of the house are not perpendicular? Will you and the child, standing close together, hear echoes? (d) **What If?** What if a rectangular house and its garage have perpendicular walls that would form an inside corner but have a breezeway between them so that the walls do not meet? Will the structure produce strong echoes for people in a wide range of locations?

- The F-117A stealth fighter (Fig. CQ35.4) is specifically designed to be a *nonretroreflector* of radar. What aspects of its design help accomplish this purpose?



Courtesy U.S. Air Force



Figure CQ35.4

5. Retroreflection by transparent spheres, mentioned in Section 35.4, can be observed with dewdrops. To do so, look at your head's shadow where it falls on dew grass. The optical display around the shadow of your head is called *heiligschein*, which is German for *holy light*. Renaissance artist Benvenuto Cellini described the phenomenon and his reaction in his *Autobiography*, at the end of Part One, and American philosopher Henry David Thoreau did the same in *Walden*, "Baker Farm," second paragraph. Do some Internet research to find out more about the *heiligschein*.
6. Sound waves have much in common with light waves, including the properties of reflection and refraction. Give an example of each of these phenomena for sound waves.
7. Total internal reflection is applied in the periscope of a submerged submarine to let the user observe events above the water surface. In this device, two prisms are arranged as shown in Figure CQ35.7 so that an incident beam of light follows the path shown. Parallel tilted, silvered mirrors could be used, but glass prisms with no silvered surfaces give higher light throughput. Propose a reason for the higher efficiency.

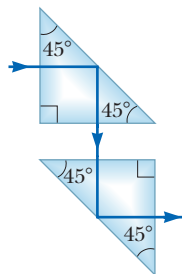


Figure CQ35.7

8. Explain why a diamond sparkles more than a glass crystal of the same shape and size.
9. A laser beam passing through a nonhomogeneous sugar solution follows a curved path. Explain.
10. The display windows of some department stores are slanted slightly inward at the bottom. This tilt is to decrease the glare from streetlights and the Sun, which would make it difficult for shoppers to see the display inside. Sketch a light ray reflecting from such a window to show how this design works.
11. At one restaurant, a worker uses colored chalk to write the daily specials on a blackboard illuminated

with a spotlight. At another restaurant, a worker writes with colored grease pencils on a flat, smooth sheet of transparent acrylic plastic with an index of refraction 1.55. The panel hangs in front of a piece of black felt. Small, bright fluorescent tube lights are installed all along the edges of the sheet,

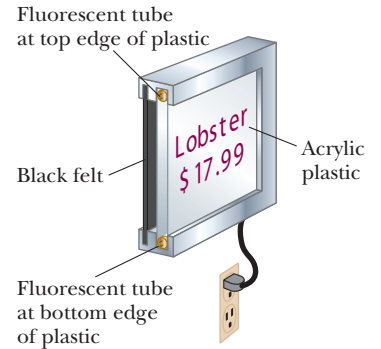


Figure CQ35.11

inside an opaque channel. Figure CQ35.11 shows a cutaway view of the sign. (a) Explain why viewers at both restaurants see the letters shining against a black background. (b) Explain why the sign at the second restaurant may use less energy from the electric company than the illuminated blackboard at the first restaurant. (c) What would be a good choice for the index of refraction of the material in the grease pencils?

12. (a) Under what conditions is a mirage formed? While driving on a hot day, sometimes you see what appears to be water on the road far ahead. When you arrive at the location of the water, however, the road is perfectly dry. Explain this phenomenon. (b) The mirage called *fata morgana* often occurs over water or in cold regions covered with snow or ice. It can cause islands to sometimes become visible, even though they are not normally visible because they are below the horizon due to the curvature of the Earth. Explain this phenomenon.
13. Figure CQ35.13 shows a pencil partially immersed in a cup of water. Why does the pencil appear to be bent?



© Cengage Learning/Charles D. Winters

Figure CQ35.13

14. A scientific supply catalog advertises a material having an index of refraction of 0.85. Is that a good product to buy? Why or why not?
15. Why do astronomers looking at distant galaxies talk about looking backward in time?

16. Try this simple experiment on your own. Take two opaque cups, place a coin at the bottom of each cup near the edge, and fill one cup with water. Next, view the cups at some angle from the side so that the coin in water is just visible as shown on the left in Figure CQ35.16. Notice that the coin in air is not visible as shown on the right in Figure CQ35.16. Explain this observation.



Figure CQ35.16

17. Figure CQ35.17a shows a desk ornament globe containing a photograph. The flat photograph is in air, inside a vertical slot located behind a water-filled compart-

ment having the shape of one half of a cylinder. Suppose you are looking at the center of the photograph and then rotate the globe about a vertical axis. You find that the center of the photograph disappears when you rotate the globe beyond a certain maximum angle (Fig. CQ35.17b). (a) Account for this phenomenon and (b) describe what you see when you turn the globe beyond this angle.



Figure CQ35.17

Problems

WebAssign

The problems found in this chapter may be assigned online in Enhanced WebAssign

1. straightforward; 2. intermediate;
3. challenging

1. full solution available in the *Student Solutions Manual/Study Guide*

AMT Analysis Model tutorial available in Enhanced WebAssign

GP Guided Problem

M Master It tutorial available in Enhanced WebAssign

W Watch It video solution available in Enhanced WebAssign

Section 35.1 The Nature of Light

Section 35.2 Measurements of the Speed of Light

- Find the energy of (a) a photon having a frequency of 5.00×10^{17} Hz and (b) a photon having a wavelength of 3.00×10^2 nm. Express your answers in units of electron volts, noting that $1 \text{ eV} = 1.60 \times 10^{-19} \text{ J}$.
- The *Apollo 11* astronauts set up a panel of efficient corner-cube retroreflectors on the Moon's surface (Fig. 35.8a). The speed of light can be found by measuring the time interval required for a laser beam to travel from the Earth, reflect from the panel, and return to the Earth. Assume this interval is measured to be 2.51 s at a station where the Moon is at the zenith and take the center-to-center distance from the Earth to the Moon to be equal to 3.84×10^8 m. (a) What is the measured speed of light? (b) Explain whether it is necessary to consider the sizes of the Earth and the Moon in your calculation.
- In an experiment to measure the speed of light using the apparatus of Armand H. L. Fizeau (see Fig. 35.2), the distance between light source and mirror was 11.45 km and the wheel had 720 notches. The experimentally determined value of c was 2.998×10^8 m/s when

the outgoing light passed through one notch and then returned through the next notch. Calculate the minimum angular speed of the wheel for this experiment.

- As a result of his observations, Ole Roemer concluded that eclipses of Io by Jupiter were delayed by 22 min during a six-month period as the Earth moved from the point in its orbit where it is closest to Jupiter to the diametrically opposite point where it is farthest from Jupiter. Using the value 1.50×10^8 km as the average radius of the Earth's orbit around the Sun, calculate the speed of light from these data.

Section 35.3 The Ray Approximation in Ray Optics

Section 35.4 Analysis Model: Wave Under Reflection

Section 35.5 Analysis Model: Wave Under Refraction

Notes: You may look up indices of refraction in Table 35.1. Unless indicated otherwise, assume the medium surrounding a piece of material is air with $n = 1.000293$.

- The wavelength of red helium–neon laser light in air is 632.8 nm. (a) What is its frequency? (b) What is its wavelength in glass that has an index of refraction of 1.50? (c) What is its speed in the glass?

6. An underwater scuba diver sees the Sun at an apparent angle of 45.0° above the horizontal. What is the actual elevation angle of the Sun above the horizontal?
7. A ray of light is incident on a flat surface of a block of crown glass that is surrounded by water. The angle of refraction is 19.6° . Find the angle of reflection.
8. Figure P35.8 shows a refracted light beam in linseed oil making an angle of $\phi = 20.0^\circ$ with the normal line NN' . The index of refraction of linseed oil is 1.48. Determine the angles (a) θ and (b) θ' .

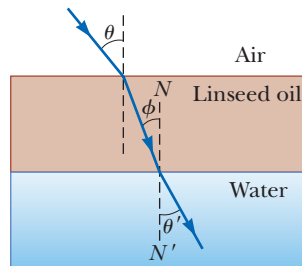


Figure P35.8

9. Find the speed of light in (a) flint glass, (b) water, and (c) cubic zirconia.
10. A dance hall is built without pillars and with a horizontal ceiling 7.20 m above the floor. A mirror is fastened flat against one section of the ceiling. Following an earthquake, the mirror is in place and unbroken. An engineer makes a quick check of whether the ceiling is sagging by directing a vertical beam of laser light up at the mirror and observing its reflection on the floor. (a) Show that if the mirror has rotated to make an angle ϕ with the horizontal, the normal to the mirror makes an angle ϕ with the vertical. (b) Show that the reflected laser light makes an angle 2ϕ with the vertical. (c) Assume the reflected laser light makes a spot on the floor 1.40 cm away from the point vertically below the laser. Find the angle ϕ .

11. A ray of light travels from air into another medium, making an angle of $\theta_1 = 45.0^\circ$ with the normal as in Figure P35.11. Find the angle of refraction θ_2 if the second medium is (a) fused quartz, (b) carbon disulfide, and (c) water.

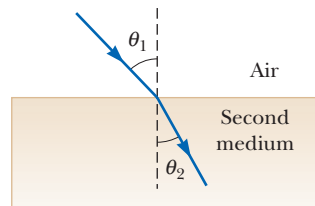


Figure P35.11

12. A ray of light strikes a flat block of glass ($n = 1.50$) of thickness 2.00 cm at an angle of 30.0° with the normal. Trace the light beam through the glass and find the angles of incidence and refraction at each surface.
13. A prism that has an apex angle of 50.0° is made of cubic zirconia. What is its minimum angle of deviation?
14. A plane sound wave in air at 20°C , with wavelength 589 mm, is incident on a smooth surface of water at 25°C at an angle of incidence of 13.0° . Determine (a) the angle of refraction for the sound wave and (b) the wavelength of the sound in water. A narrow

beam of sodium yellow light, with wavelength 589 nm in vacuum, is incident from air onto a smooth water surface at an angle of incidence of 13.0° . Determine (c) the angle of refraction and (d) the wavelength of the light in water. (e) Compare and contrast the behavior of the sound and light waves in this problem.

15. A light ray initially in water enters a transparent substance at an angle of incidence of 37.0° , and the transmitted ray is refracted at an angle of 25.0° . Calculate the speed of light in the transparent substance.
16. A laser beam is incident at an angle of 30.0° from the vertical onto a solution of corn syrup in water. The beam is refracted to 19.24° from the vertical. (a) What is the index of refraction of the corn syrup solution? Assume that the light is red, with vacuum wavelength 632.8 nm. Find its (b) wavelength, (c) frequency, and (d) speed in the solution.
17. A ray of light strikes the midpoint of one face of an equiangular ($60^\circ-60^\circ-60^\circ$) glass prism ($n = 1.5$) at an angle of incidence of 30° . (a) Trace the path of the light ray through the glass and find the angles of incidence and refraction at each surface. (b) If a small fraction of light is also reflected at each surface, what are the angles of reflection at the surfaces?
18. The reflecting surfaces of two intersecting flat mirrors are at an angle θ ($0^\circ < \theta < 90^\circ$) as shown in Figure P35.18. For a light ray that strikes the horizontal mirror, show that the emerging ray will intersect the incident ray at an angle $\beta = 180^\circ - 2\theta$.

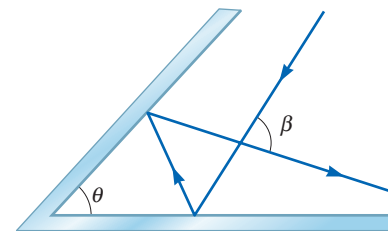


Figure P35.18

19. When you look through a window, by what time interval is the light you see delayed by having to go through glass instead of air? Make an order-of-magnitude estimate on the basis of data you specify. By how many wavelengths is it delayed?
20. Two flat, rectangular mirrors, both perpendicular to a horizontal sheet of paper, are set edge to edge with their reflecting surfaces perpendicular to each other. (a) A light ray in the plane of the paper strikes one of the mirrors at an arbitrary angle of incidence θ_1 . Prove that the final direction of the ray, after reflection from both mirrors, is opposite its initial direction. (b) **What IF?** Now assume the paper is replaced with a third flat mirror, touching edges with the other two and perpendicular to both, creating a corner-cube retroreflector (Fig. 35.8a). A ray of light is incident from any direction within the octant of space bounded by the reflecting surfaces. Argue that the ray will reflect once from each mirror and that its final direction will be opposite its original direction. The *Apollo 11* astronauts

placed a panel of corner-cube retroreflectors on the Moon. Analysis of timing data taken with it reveals that the radius of the Moon's orbit is increasing at the rate of 3.8 cm/yr as it loses kinetic energy because of tidal friction.

- 21.** The two mirrors illustrated **W** in Figure P35.21 meet at a right angle. The beam of light in the vertical plane indicated by the dashed lines strikes mirror 1 as shown. (a) Determine the distance the reflected light beam travels before striking mirror 2. (b) In what direction does the light beam travel after being reflected from mirror 2?

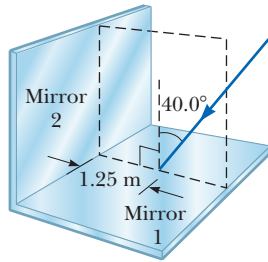


Figure P35.21

- 22.** When the light ray illustrated **W** in Figure P35.22 passes through the glass block of index of refraction $n = 1.50$, it is shifted laterally by the distance d . (a) Find the value of d . (b) Find the time interval required for the light to pass through the glass block.

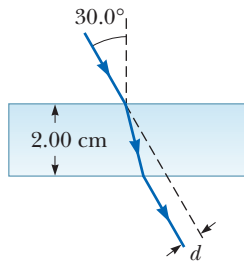


Figure P35.22

- 23.** Two light pulses are emitted simultaneously from a source. Both pulses travel through the same total length of air to a detector, but mirrors shunt one pulse along a path that carries it through an extra length of 6.20 m of ice along the way. Determine the difference in the pulses' times of arrival at the detector.
- 24.** Light passes from air into flint glass at a nonzero angle of incidence. (a) Is it possible for the component of its velocity perpendicular to the interface to remain constant? Explain your answer. (b) **What If?** Can the component of velocity parallel to the interface remain constant during refraction? Explain your answer.
- 25.** A laser beam with vacuum wavelength 632.8 nm is incident from air onto a block of Lucite as shown in Figure 35.10b. The line of sight of the photograph is perpendicular to the plane in which the light moves. Find (a) the speed, (b) the frequency, and (c) the wavelength of the light in the Lucite. *Suggestion:* Use a protractor.

- 26.** A narrow beam of ultrasonic waves reflects off the liver tumor illustrated in Figure P35.26. The speed of the wave is 10.0% less in the liver than in the surrounding medium. Determine the depth of the tumor.

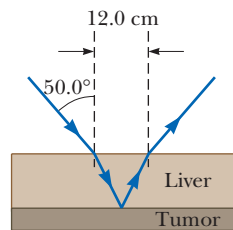


Figure P35.26

- 27.** An opaque cylindrical tank with an open top has a diameter of 3.00 m and is completely **AMT** **M** **W** filled with water. When the afternoon Sun reaches an angle of 28.0° above the horizon, sunlight ceases to illuminate any part of the bottom of the tank. How deep is the tank?

- 28.** A triangular glass prism with apex angle 60.0° has an index of refraction of 1.50. (a) Show that if its angle of incidence on the first surface is $\theta_1 = 48.6^\circ$, light will pass symmetrically through the prism as shown in Figure 35.17. (b) Find the angle of deviation δ_{\min} for $\theta_1 = 48.6^\circ$. (c) **What If?** Find the angle of deviation if the angle of incidence on the first surface is 45.6° . (d) Find the angle of deviation if $\theta_1 = 51.6^\circ$.

- 29.** Light of wavelength 700 nm is incident on the face of a fused quartz prism ($n = 1.458$ at 700 nm) at an incidence angle of 75.0° . The apex angle of the prism is 60.0° . Calculate the angle (a) of refraction at the first surface, (b) of incidence at the second surface, (c) of refraction at the second surface, and (d) between the incident and emerging rays.

- 30.** Figure P35.30 shows a light ray incident on a series of slabs having different refractive indices, where $n_1 < n_2 < n_3 < n_4$. Notice that the path of the ray steadily bends toward the normal. If the variation in n were continuous, the path would form a smooth curve. Use this idea and a ray diagram to explain why you can see the Sun at sunset after it has fallen below the horizon.

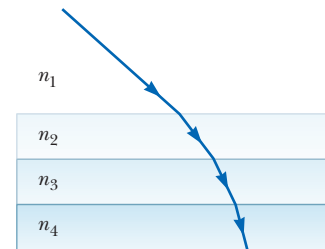


Figure P35.30

- 31.** Three sheets of plastic have unknown indices of refraction. Sheet 1 is placed on top of sheet 2, and a laser beam is directed onto the sheets from above. The laser beam enters sheet 1 and then strikes the interface between sheet 1 and sheet 2 at an angle of 26.5° with the normal. The refracted beam in sheet 2 makes an angle of 31.7° with the normal. The experiment is repeated with sheet 3 on top of sheet 2, and, with the same angle of incidence on the sheet 3–sheet 2 interface, the refracted beam makes an angle of 36.7° with the normal. If the experiment is repeated again with sheet 1 on top of sheet 3, with that same angle of incidence on the sheet 1–sheet 3 interface, what is the expected angle of refraction in sheet 3?

- 32.** A person looking into an empty container is able to see the far edge of the container's bottom as shown in Figure P35.32a. The height of the container is h , and its width is d . When the container is completely filled with a fluid of index of refraction n and viewed from the same angle, the person can see the center of a coin at

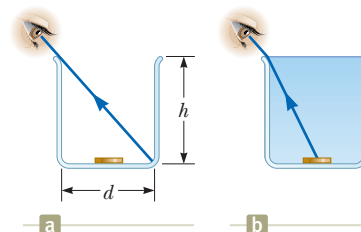


Figure P35.32

the middle of the container's bottom as shown in Figure P35.32b. (a) Show that the ratio h/d is given by

$$\frac{h}{d} = \sqrt{\frac{n^2 - 1}{4 - n^2}}$$

(b) Assuming the container has a width of 8.00 cm and is filled with water, use the expression above to find the height of the container. (c) For what range of values of n will the center of the coin not be visible for any values of h and d ?

33. A laser beam is incident on a 45° - 45° - 90° prism perpendicular to one of its faces as shown in Figure P35.33. The transmitted beam that exits the hypotenuse of the prism makes an angle of $\theta = 15.0^\circ$ with the direction of the incident beam. Find the index of refraction of the prism.

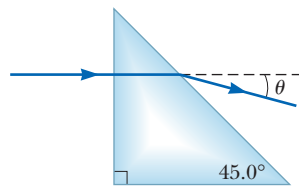


Figure P35.33

34. A submarine is 300 m horizontally from the shore of a freshwater lake and 100 m beneath the surface of the water. A laser beam is sent from the submarine so that the beam strikes the surface of the water 210 m from the shore. A building stands on the shore, and the laser beam hits a target at the top of the building. The goal is to find the height of the target above sea level. (a) Draw a diagram of the situation, identifying the two triangles that are important in finding the solution. (b) Find the angle of incidence of the beam striking the water-air interface. (c) Find the angle of refraction. (d) What angle does the refracted beam make with the horizontal? (e) Find the height of the target above sea level.

35. A beam of light both reflects and refracts at the surface between air and glass as shown in Figure P35.35. If the refractive index of the glass is n_g , find the angle of incidence θ_1 in the air that would result in the reflected ray and the refracted ray being perpendicular to each other.

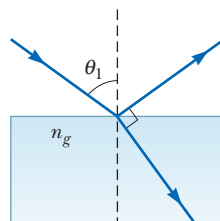


Figure P35.35

Section 35.6 Huygens's Principle

Section 35.7 Dispersion

36. The index of refraction for red light in water is 1.331 and that for blue light is 1.340. If a ray of white light enters the water at an angle of incidence of 83.0° , what are the underwater angles of refraction for the (a) red and (b) blue components of the light?
37. A light beam containing red and violet wavelengths is incident on a slab of quartz at an angle of incidence of 50.0° . The index of refraction of quartz is 1.455 at 600 nm (red light), and its index of refraction is 1.468 at 410 nm (violet light). Find the dispersion of the slab, which is defined as the difference in the angles of refraction for the two wavelengths.

38. The speed of a water wave is described by $v = \sqrt{gd}$, where d is the water depth, assumed to be small compared to the wavelength. Because their speed changes, water waves refract when moving into a region of different depth. (a) Sketch a map of an ocean beach on the eastern side of a landmass. Show contour lines of constant depth under water, assuming a reasonably uniform slope. (b) Suppose waves approach the coast from a storm far away to the north-northeast. Demonstrate that the waves move nearly perpendicular to the shoreline when they reach the beach. (c) Sketch a map of a coastline with alternating bays and headlands as suggested in Figure P35.38. Again make a reasonable guess about the shape of contour lines of constant depth. (d) Suppose waves approach the coast, carrying energy with uniform density along originally straight wave fronts. Show that the energy reaching the coast is concentrated at the headlands and has lower intensity in the bays.



Figure P35.38

39. The index of refraction for violet light in silica flint glass is 1.66, and that for red light is 1.62. What is the angular spread of visible light passing through a prism of apex angle 60.0° if the angle of incidence is 50.0° ? See Figure P35.39.

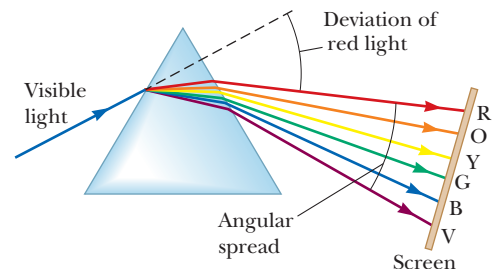


Figure P35.39 Problems 39 and 40.

40. The index of refraction for violet light in silica flint glass is n_v , and that for red light is n_r . What is the angular spread of visible light passing through a prism of apex angle Φ if the angle of incidence is θ ? See Figure P35.39.

Section 35.8 Total Internal Reflection

41. A glass optical fiber ($n = 1.50$) is submerged in water ($n = 1.33$). What is the critical angle for light to stay inside the fiber?

42. For 589-nm light, calculate the critical angle for the following materials surrounded by air: (a) cubic zirconia, (b) flint glass, and (c) ice.

43. A triangular glass prism with apex angle $\Phi = 60.0^\circ$ has an index of refraction $n = 1.50$ (Fig. P35.43). What is the smallest angle of incidence θ_1 for which a light ray can emerge from the other side?

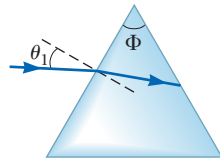


Figure P35.43

Problems 43 and 44.

44. A triangular glass prism with apex angle Φ has an index of refraction n (Fig. P35.43). What is the smallest angle of incidence θ_1 for which a light ray can emerge from the other side?

45. Assume a transparent rod of diameter $d = 2.00 \mu\text{m}$ has an index of refraction of 1.36. Determine the maximum angle θ for which the light rays incident on the end of the rod in Figure P35.45 are subject to total internal reflection along the walls of the rod. Your answer defines the size of the *cone of acceptance* for the rod.

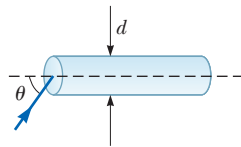


Figure P35.45

46. Consider a light ray traveling between air and a diamond cut in the shape shown in Figure P35.46. (a) Find the critical angle for total internal reflection for light in the diamond incident on the interface between the diamond and the outside air. (b) Consider the light ray incident normally on the top surface of the diamond as shown in Figure P35.46. Show that the light traveling toward point P in the diamond is totally reflected. **What If?** Suppose the diamond is immersed in water. (c) What is the critical angle at the diamond–water interface? (d) When the diamond is immersed in water, does the light ray entering the top surface in Figure P35.46 undergo total internal reflection at P ? Explain. (e) If the light ray entering the diamond remains vertical as shown in Figure P35.46, which way should the diamond in the water be rotated about an axis perpendicular to the page through O so that light will exit the diamond at P ? (f) At what angle of rotation in part (e) will light first exit the diamond at point P ?

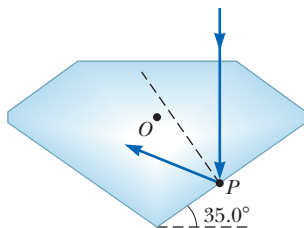


Figure P35.46

47. Consider a common mirage formed by superheated air immediately above a roadway. A truck driver whose eyes are 2.00 m above the road, where $n = 1.000293$, looks forward. She perceives the illusion of a patch of

water ahead on the road. The road appears wet only beyond a point on the road at which her line of sight makes an angle of 1.20° below the horizontal. Find the index of refraction of the air immediately above the road surface.

48. A room contains air in which the speed of sound is 343 m/s. The walls of the room are made of concrete in which the speed of sound is 1850 m/s. (a) Find the critical angle for total internal reflection of sound at the concrete–air boundary. (b) In which medium must the sound be initially traveling if it is to undergo total internal reflection? (c) “A bare concrete wall is a highly efficient mirror for sound.” Give evidence for or against this statement.

49. An optical fiber has an index of refraction n and diameter d . It is surrounded by vacuum. Light is sent into the fiber along its axis as shown in Figure P35.49. (a) Find the smallest outside radius R_{\min} permitted for a bend in the fiber if no light is to escape. (b) **What If?** What result does part (a) predict as d approaches zero? Is this behavior reasonable? Explain. (c) As n increases? (d) As n approaches 1? (e) Evaluate R_{\min} assuming the fiber diameter is $100 \mu\text{m}$ and its index of refraction is 1.40.

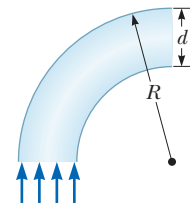


Figure P35.49

50. Around 1968, Richard A. Thorud, an engineer at The Toro Company, invented a gasoline gauge for small engines diagrammed in Figure P35.50. The gauge has no moving parts. It consists of a flat slab of transparent plastic fitting vertically into a slot in the cap on the gas tank. None of the plastic has a reflective coating. The plastic projects from the horizontal top down nearly to the bottom of the opaque tank. Its lower edge is cut with facets making angles of 45° with the horizontal. A lawn mower operator looks down from above and sees a boundary between bright and dark on the gauge. The location of the boundary, across the width of the plastic, indicates the quantity of gasoline in the tank. (a) Explain how the gauge works. (b) Explain the design requirements, if any, for the index of refraction of the plastic.




Figure P35.50

Additional Problems

51. A beam of light is incident from air on the surface of a liquid. If the angle of incidence is 30.0° and the angle of refraction is 22.0° , find the critical angle for total internal reflection for the liquid when surrounded by air.
52. Consider a horizontal interface between air above and glass of index of refraction 1.55 below. (a) Draw a light ray incident from the air at angle of incidence 30.0° . Determine the angles of the reflected and refracted rays and show them on the diagram. (b) **What If?** Now suppose the light ray is incident from the glass at an angle of 30.0° . Determine the angles of the reflected

and refracted rays and show all three rays on a new diagram. (c) For rays incident from the air onto the air–glass surface, determine and tabulate the angles of reflection and refraction for all the angles of incidence at 10.0° intervals from 0° to 90.0° . (d) Do the same for light rays coming up to the interface through the glass.

- 53.** A small light fixture on the bottom of a swimming pool is 1.00 m below the surface. The light emerging from the still water forms a circle on the water surface. What is the diameter of this circle?

- 54.** Why is the following situation impossible? While at the bottom of a calm freshwater lake, a scuba diver sees the Sun at an apparent angle of 38.0° above the horizontal.
- 55.** A digital video disc (DVD) records information in a spiral track approximately $1\ \mu\text{m}$ wide. The track consists of a series of pits in the information layer (Fig. P35.55a) that scatter light from a laser beam sharply focused on them. The laser shines in from below through transparent plastic of thickness $t = 1.20\ \text{mm}$ and index of refraction 1.55 (Fig. P35.55b). Assume the width of the laser beam at the information layer must be $a = 1.00\ \mu\text{m}$ to read from only one track and not from its neighbors. Assume the width of the beam as it enters the transparent plastic is $w = 0.700\ \text{mm}$. A lens makes the beam converge into a cone with an apex angle $2\theta_1$ before it enters the DVD. Find the incidence angle θ_1 of the light at the edge of the conical beam. This design is relatively immune to small dust particles degrading the video quality.

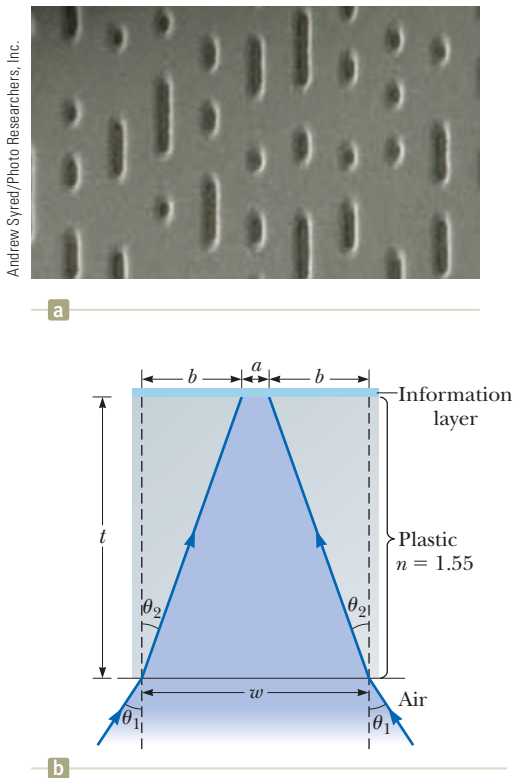


Figure P35.55

- 56.** How many times will the incident beam shown in Figure P35.56 be reflected by each of the parallel mirrors?

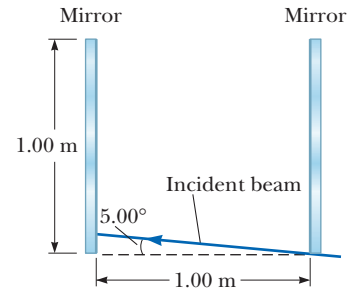


Figure P35.56

- 57.** When light is incident normally on the interface between two transparent optical media, the intensity of the reflected light is given by the expression

$$S'_1 = \left(\frac{n_2 - n_1}{n_2 + n_1} \right)^2 S_1$$

In this equation, S_1 represents the average magnitude of the Poynting vector in the incident light (the incident intensity), S'_1 is the reflected intensity, and n_1 and n_2 are the refractive indices of the two media. (a) What fraction of the incident intensity is reflected for 589-nm light normally incident on an interface between air and crown glass? (b) Does it matter in part (a) whether the light is in the air or in the glass as it strikes the interface?

- 58.** Refer to Problem 57 for its description of the reflected intensity of light normally incident on an interface between two transparent media. (a) For light normally incident on an interface between vacuum and a transparent medium of index n , show that the intensity S_2 of the transmitted light is given by $S_2/S_1 = 4n/(n + 1)^2$. (b) Light travels perpendicularly through a diamond slab, surrounded by air, with parallel surfaces of entry and exit. Apply the transmission fraction in part (a) to find the approximate overall transmission through the slab of diamond, as a percentage. Ignore light reflected back and forth within the slab.

- 59.** A light ray enters the atmosphere of the Earth and descends vertically to the surface a distance $h = 100\ \text{km}$ below. The index of refraction where the light enters the atmosphere is 1.00, and it increases linearly with distance to have the value $n = 1.000\ 293$ at the Earth's surface. (a) Over what time interval does the light traverse this path? (b) By what percentage is the time interval larger than that required in the absence of the Earth's atmosphere?

- 60.** A light ray enters the atmosphere of a planet and descends vertically to the surface a distance h below. The index of refraction where the light enters the atmosphere is 1.00, and it increases linearly with distance to have the value n at the planet surface. (a) Over what time interval does the light traverse this path? (b) By what fraction is the time interval larger than that required in the absence of an atmosphere?

- 61.** A narrow beam of light is incident from air onto the surface of glass with index of refraction 1.56. Find

the angle of incidence for which the corresponding angle of refraction is half the angle of incidence. *Suggestion:* You might want to use the trigonometric identity $\sin 2\theta = 2 \sin \theta \cos \theta$.

62. One technique for measuring the apex angle of a prism is shown in Figure P35.62. Two parallel rays of light are directed onto the apex of the prism so that the rays reflect from opposite faces of the prism. The angular separation γ of the two reflected rays can be measured. Show that $\phi = \frac{1}{2}\gamma$.

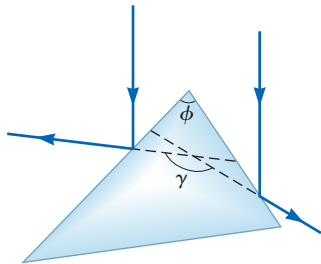


Figure P35.62

63. A thief hides a precious jewel by placing it on the bottom of a public swimming pool. He places a circular raft on the surface of the water directly above and centered over the jewel as shown in Figure P35.63. The surface of the water is calm. The raft, of diameter $d = 4.54$ m, prevents the jewel from being seen by any observer above the water, either on the raft or on the side of the pool. What is the maximum depth h of the pool for the jewel to remain unseen?

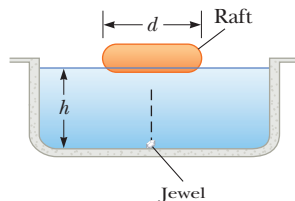


Figure P35.63

64. **Review.** A mirror is often “silvered” with aluminum. By adjusting the thickness of the metallic film, one can make a sheet of glass into a mirror that reflects anything between 3% and 98% of the incident light, transmitting the rest. Prove that it is impossible to construct a “one-way mirror” that would reflect 90% of the electromagnetic waves incident from one side and reflect 10% of those incident from the other side. *Suggestion:* Use Clausius’s statement of the second law of thermodynamics.

65. **M** The light beam in Figure P35.65 strikes surface 2 at the critical angle. Determine the angle of incidence θ_1 .

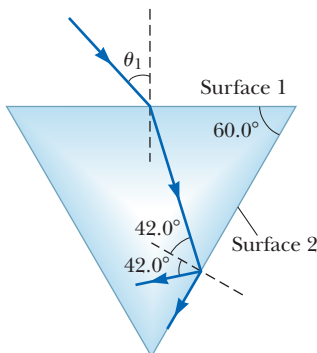


Figure P35.65

66. *Why is the following situation impossible?* A laser beam strikes one end of a slab of material of length $L = 42.0$ cm and thickness $t = 3.10$ mm as shown in Figure P35.66 (not to scale). It enters the material at the center of the left end, striking it at an angle of incidence of $\theta = 50.0^\circ$. The index of refraction of the slab is $n = 1.48$. The light makes 85 internal reflections from the top and bottom of the slab before exiting at the other end.

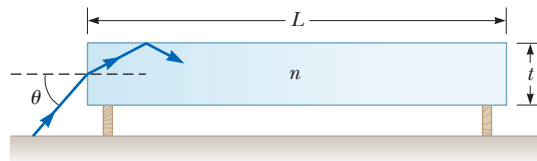


Figure P35.66

67. **W** A 4.00-m-long pole stands vertically in a freshwater lake having a depth of 2.00 m. The Sun is 40.0° above the horizontal. Determine the length of the pole’s shadow on the bottom of the lake.

68. A light ray of wavelength 589 nm is incident at an angle θ on the top surface of a block of polystyrene as shown in Figure P35.68. (a) Find the maximum value of θ for which the refracted ray undergoes total internal reflection at the point P located at the left vertical face of the block. **What If?** Repeat the calculation for the case in which the polystyrene block is immersed in (b) water and (c) carbon disulfide. Explain your answers.

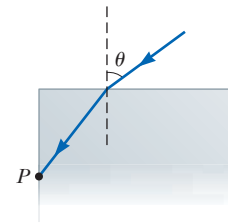


Figure P35.68

69. **AMT** A light ray traveling in air is incident on one face of a right-angle prism with index of refraction $n = 1.50$ as shown in Figure P35.69, and the ray follows the path shown in the figure. Assuming $\theta = 60.0^\circ$ and the base of the prism is mirrored, determine the angle ϕ made by the outgoing ray with the normal to the right face of the prism.

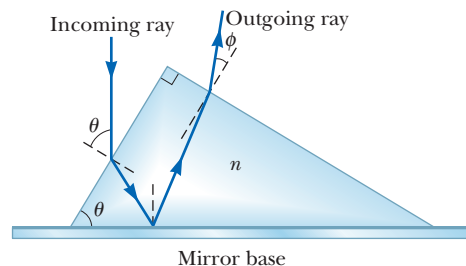


Figure P35.69

70. As sunlight enters the Earth’s atmosphere, it changes direction due to the small difference between the speeds of light in vacuum and in air. The duration of an *optical day* is defined as the time interval between the instant when the top of the rising Sun is just visible above the horizon and the instant when the top of the Sun just disappears below the horizontal plane. The duration of the *geometric day* is defined as the time interval between the instant a mathematically straight line between an observer and the top of the Sun just clears the horizon and the instant this line just dips below the horizon. (a) Explain which is longer, an optical day or a geometric day. (b) Find the difference between these two time intervals. Model the Earth’s atmosphere as uniform, with index of refraction 1.000 293, a sharply defined upper surface, and depth 8 614 m. Assume the observer is at the

Earth's equator so that the apparent path of the rising and setting Sun is perpendicular to the horizon.

71. A material having an index of refraction n is surrounded by vacuum and is in the shape of a quarter circle of radius R (Fig. P35.71). A light ray parallel to the base of the material is incident from the left at a distance L above the base and emerges from the material at the angle θ . Determine an expression for θ in terms of n , R , and L .

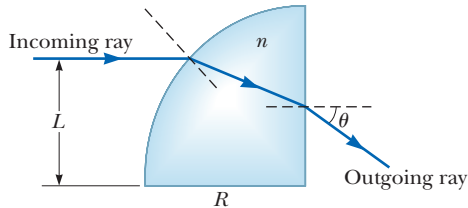


Figure P35.71

72. A ray of light passes from air into water. For its deviation angle $\delta = |\theta_1 - \theta_2|$ to be 10.0° , what must its angle of incidence be?
73. As shown in Figure P35.73, a light ray is incident normal to one face of a $30^\circ\text{--}60^\circ\text{--}90^\circ$ block of flint glass (a prism) that is immersed in water. (a) Determine the exit angle θ_3 of the ray. (b) A substance is dissolved in the water to increase the index of refraction n_2 . At what value of n_2 does total internal reflection cease at point P ?

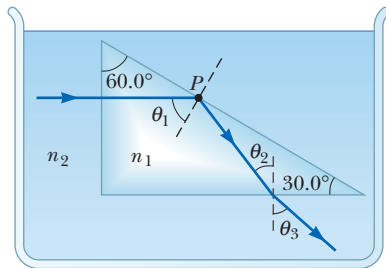


Figure P35.73

74. A transparent cylinder of radius $R = 2.00$ m has a mirrored surface on its right half as shown in Figure P35.74. A light ray traveling in air is incident on the left side of the cylinder. The incident light ray and exiting light ray are parallel, and $d = 2.00$ m. Determine the index of refraction of the material.

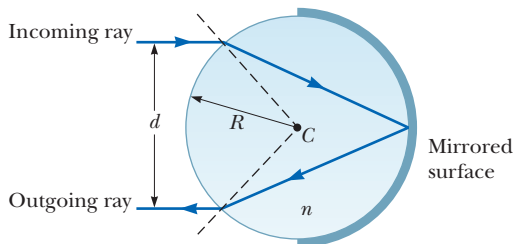


Figure P35.74

75. Figure P35.75 shows the path of a light beam through several slabs with different indices of refraction. (a) If $\theta_1 = 30.0^\circ$, what is the angle θ_2 of the emerging beam?

- (b) What must the incident angle θ_1 be to have total internal reflection at the surface between the medium with $n = 1.20$ and the medium with $n = 1.00$?

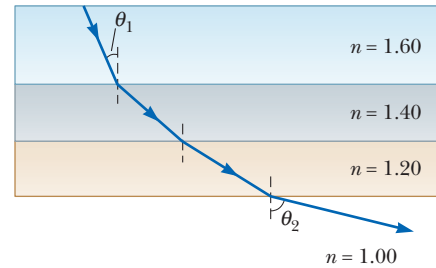


Figure P35.75

76. A. H. Pfund's method for measuring the index of refraction of glass is illustrated in Figure P35.76. One face of a slab of thickness t is painted white, and a small hole scraped clear at point P serves as a source of diverging rays when the slab is illuminated from below. Ray PBB' strikes the clear surface at the critical angle and is totally reflected, as are rays such as PCC' . Rays such as PAA' emerge from the clear surface. On the painted surface, there appears a dark circle of diameter d surrounded by an illuminated region, or halo. (a) Derive an equation for n in terms of the measured quantities d and t . (b) What is the diameter of the dark circle if $n = 1.52$ for a slab 0.600 cm thick? (c) If white light is used, dispersion causes the critical angle to depend on color. Is the inner edge of the white halo tinged with red light or with violet light? Explain.

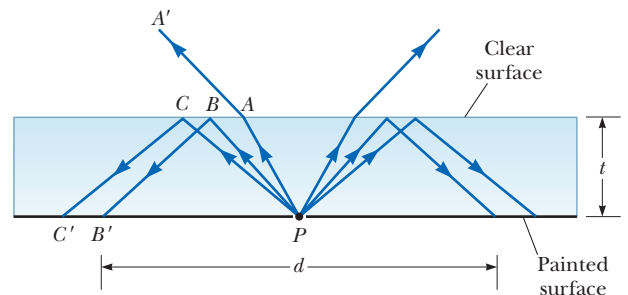


Figure P35.76

77. A light ray enters a rectangular block of plastic at an angle $\theta_1 = 45.0^\circ$ and emerges at an angle $\theta_2 = 76.0^\circ$ as shown in Figure P35.77. (a) Determine the index of refraction of the plastic. (b) If the light ray enters the plastic at a point $L = 50.0$ cm from the bottom edge, what time interval is required for the light ray to travel through the plastic?

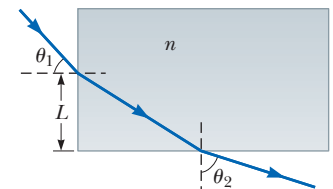


Figure P35.77

78. Students allow a narrow beam of laser light to strike a water surface. They measure the angle of refraction for selected angles of incidence and record the data shown in the accompanying table. (a) Use the data to

verify Snell's law of refraction by plotting the sine of the angle of incidence versus the sine of the angle of refraction. (b) Explain what the shape of the graph demonstrates. (c) Use the resulting plot to deduce the index of refraction of water, explaining how you do so.

Angle of Incidence (degrees)	Angle of Refraction (degrees)
10.0	7.5
20.0	15.1
30.0	22.3
40.0	28.7
50.0	35.2
60.0	40.3
70.0	45.3
80.0	47.7

79. The walls of an ancient shrine are perpendicular to the four cardinal compass directions. On the first day of spring, light from the rising Sun enters a rectangular window in the eastern wall. The light traverses 2.37 m horizontally to shine perpendicularly on the wall opposite the window. A tourist observes the patch of light moving across this western wall. (a) With what speed does the illuminated rectangle move? (b) The tourist holds a small, square mirror flat against the western wall at one corner of the rectangle of light. The mirror reflects light back to a spot on the eastern wall close beside the window. With what speed does the smaller square of light move across that wall? (c) Seen from a latitude of 40.0° north, the rising Sun moves through the sky along a line making a 50.0° angle with the southeastern horizon. In what direction does the rectangular patch of light on the western wall of the shrine move? (d) In what direction does the smaller square of light on the eastern wall move?

80. Figure P35.80 shows a top view of a square enclosure. The inner surfaces are plane mirrors. A ray of light enters a small hole in the center of one mirror. (a) At what angle θ must the ray enter if it exits through the hole after being reflected once by each of the other three mirrors? (b) **What If?** Are there other values of θ for which the ray can exit after multiple reflections? If so, sketch one of the ray's paths.

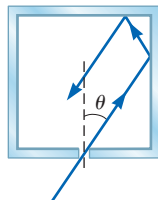


Figure P35.80

Challenge Problems

81. A hiker stands on an isolated mountain peak near sunset and observes a rainbow caused by water droplets in the air at a distance of 8.00 km along her line of sight to the most intense light from the rainbow. The valley is 2.00 km below the mountain peak and entirely flat. What fraction of the complete circular arc of the rainbow is visible to the hiker?
82. Why is the following situation impossible? The perpendicular distance of a lightbulb from a large plane mirror is twice the perpendicular distance of a person from the mirror. Light from the lightbulb reaches the person by

two paths: (1) it travels to the mirror and reflects from the mirror to the person, and (2) it travels directly to the person without reflecting off the mirror. The total distance traveled by the light in the first case is 3.10 times the distance traveled by the light in the second case.

83. Figure P35.83 shows an overhead view of a room of square floor area and side L . At the center of the room is a mirror set in a vertical plane and rotating on a vertical shaft at angular speed ω about an axis coming out of the page. A bright red laser beam enters from the center point on one wall of the

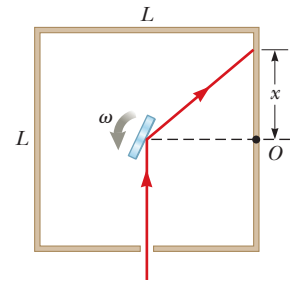


Figure P35.83

- As the mirror rotates, the reflected laser beam creates a red spot sweeping across the walls of the room. (a) When the spot of light on the wall is at distance x from point O , what is its speed? (b) What value of x corresponds to the minimum value for the speed? (c) What is the minimum value for the speed? (d) What is the maximum speed of the spot on the wall? (e) In what time interval does the spot change from its minimum to its maximum speed?
84. Pierre de Fermat (1601–1665) showed that whenever light travels from one point to another, its actual path is the path that requires the smallest time interval. This statement is known as *Fermat's principle*. The simplest example is for light propagating in a homogeneous medium. It moves in a straight line because a straight line is the shortest distance between two points. Derive Snell's law of refraction from Fermat's principle. Proceed as follows. In Figure P35.84, a light ray travels from point P in medium 1 to point Q in medium 2. The two points are, respectively, at perpendicular distances a and b from the interface. The displacement from P to Q has the component d parallel to the interface, and we let x represent the coordinate of the point where the ray enters the second medium. Let $t = 0$ be the instant the light starts from P . (a) Show that the time at which the light arrives at Q is

$$t = \frac{r_1}{v_1} + \frac{r_2}{v_2} = \frac{n_1 \sqrt{a^2 + x^2}}{c} + \frac{n_2 \sqrt{b^2 + (d-x)^2}}{c}$$

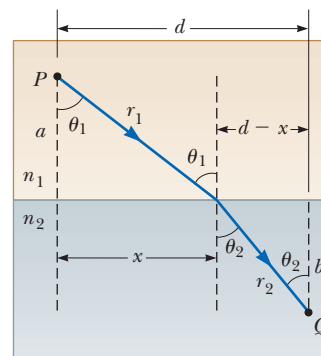


Figure P35.84 Problems 84 and 85.

(b) To obtain the value of x for which t has its minimum value, differentiate t with respect to x and set the derivative equal to zero. Show that the result implies

$$\frac{n_1 x}{\sqrt{a^2 + x^2}} = \frac{n_2 (d - x)}{\sqrt{b^2 + (d - x)^2}}$$

(c) Show that this expression in turn gives Snell's law,

$$n_1 \sin \theta_1 = n_2 \sin \theta_2$$

85. Refer to Problem 84 for the statement of Fermat's principle of least time. Derive the law of reflection (Eq. 35.2) from Fermat's principle.

86. Suppose a luminous sphere of radius R_1 (such as the Sun) is surrounded by a uniform atmosphere of radius $R_2 > R_1$ and index of refraction n . When the sphere is viewed from a location far away in vacuum, what is its apparent radius (a) when $R_2 > nR_1$ and (b) when $R_2 < nR_1$?

87. This problem builds upon the results of Problems 57 and 58. Light travels perpendicularly through a diamond slab, surrounded by air, with parallel surfaces of entry and exit. The intensity of the transmitted light is what fraction of the incident intensity? Include the effects of light reflected back and forth inside the slab.

Image Formation

- 36.1 Images Formed by Flat Mirrors
- 36.2 Images Formed by Spherical Mirrors
- 36.3 Images Formed by Refraction
- 36.4 Images Formed by Thin Lenses
- 36.5 Lens Aberrations
- 36.6 The Camera
- 36.7 The Eye
- 36.8 The Simple Magnifier
- 36.9 The Compound Microscope
- 36.10 The Telescope



The light rays coming from the leaves in the background of this scene did not form a focused image in the camera that took this photograph. Consequently, the background appears very blurry. Light rays passing through the raindrop, however, have been altered so as to form a focused image of the background leaves for the camera. In this chapter, we investigate the formation of images as light rays reflect from mirrors and refract through lenses.

(Don Hammond Photography Ltd. RF)

This chapter is concerned with the images that result when light rays encounter flat or curved surfaces between two media. Images can be formed by either reflection or refraction due to these surfaces. We can design mirrors and lenses to form images with desired characteristics. In this chapter, we continue to use the ray approximation and assume light travels in straight lines. We first study the formation of images by mirrors and lenses and techniques for locating an image and determining its size. Then we investigate how to combine these elements into several useful optical instruments such as microscopes and telescopes.

36.1 Images Formed by Flat Mirrors

Image formation by mirrors can be understood through the behavior of light rays as described by the wave under reflection analysis model. We begin by considering the simplest possible mirror, the flat mirror. Consider a point source of light placed at O in Figure 36.1, a distance p in front of a flat mirror. The distance p is called the **object distance**. Diverging light rays leave the source and are reflected from the mirror. Upon reflection, the rays continue to diverge. The dashed lines in Figure 36.1 are extensions of the diverging rays back to a point of

intersection at I . The diverging rays appear to the viewer to originate at the point I behind the mirror. Point I , which is a distance q behind the mirror, is called the **image** of the object at O . The distance q is called the **image distance**. Regardless of the system under study, images can always be located by extending diverging rays back to a point at which they intersect. Images are located either at a point from which rays of light *actually* diverge or at a point from which they *appear* to diverge.

Images are classified as *real* or *virtual*. A **real image** is formed when all light rays pass through and diverge from the image point; a **virtual image** is formed when most if not all of the light rays do *not* pass through the image point but only appear to diverge from that point. The image formed by the mirror in Figure 36.1 is virtual. No light rays from the object exist behind the mirror, at the location of the image, so the light rays in front of the mirror only seem to be diverging from I . The image of an object seen in a flat mirror is *always* virtual. Real images can be displayed on a screen (as at a movie theater), but virtual images cannot be displayed on a screen. We shall see an example of a real image in Section 36.2.

We can use the simple geometry in Figure 36.2 to examine the properties of the images of extended objects formed by flat mirrors. Even though there are an infinite number of choices of direction in which light rays could leave each point on the object (represented by a gray arrow), we need to choose only two rays to determine where an image is formed. One of those rays starts at P , follows a path perpendicular to the mirror to Q , and reflects back on itself. The second ray follows the oblique path PR and reflects as shown in Figure 36.2 according to the law of reflection. An observer in front of the mirror would extend the two reflected rays back to the point at which they appear to have originated, which is point P' behind the mirror. A continuation of this process for points other than P on the object would result in a virtual image (represented by a pink arrow) of the entire object behind the mirror. Because triangles PQR and $P'QR$ are congruent, $PQ = P'Q$, so $|p| = |q|$. Therefore, the image formed of an object placed in front of a flat mirror is as far behind the mirror as the object is in front of the mirror.

The geometry in Figure 36.2 also reveals that the object height h equals the image height h' . Let us define **lateral magnification** M of an image as follows:

$$M = \frac{\text{image height}}{\text{object height}} = \frac{h'}{h} \quad (36.1)$$

This general definition of the lateral magnification for an image from any type of mirror is also valid for images formed by lenses, which we study in Section 36.4. For a flat mirror, $M = +1$ for any image because $h' = h$. The positive value of the magnification signifies that the image is upright. (By upright we mean that if the object arrow points upward as in Figure 36.2, so does the image arrow.)

A flat mirror produces an image that has an *apparent* left–right reversal. You can see this reversal by standing in front of a mirror and raising your right hand as shown in Figure 36.3. The image you see raises its left hand. Likewise, your hair appears to be parted on the side opposite your real part, and a mole on your right cheek appears to be on your left cheek.

This reversal is not *actually* a left–right reversal. Imagine, for example, lying on your left side on the floor with your body parallel to the mirror surface. Now your head is on the left and your feet are on the right. If you shake your feet, the image does not shake its head! If you raise your right hand, however, the image again raises its left hand. Therefore, the mirror again appears to produce a left–right reversal but in the up–down direction!

The reversal is actually a *front–back reversal*, caused by the light rays going forward toward the mirror and then reflecting back from it. An interesting

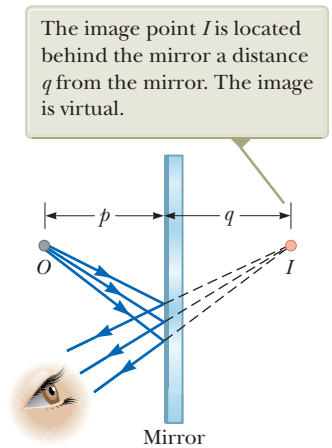


Figure 36.1 An image formed by reflection from a flat mirror.

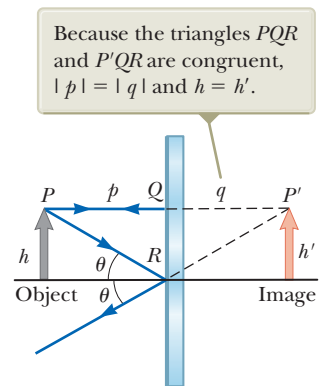


Figure 36.2 A geometric construction that is used to locate the image of an object placed in front of a flat mirror.

The thumb is on the left side of both real hands and on the left side of the image. That the thumb is not on the right side of the image indicates that there is no left-to-right reversal.



Figure 36.3 The image in the mirror of a person's right hand is reversed front to back, which makes the right hand appear to be a left hand.

exercise is to stand in front of a mirror while holding an overhead transparency in front of you so that you can read the writing on the transparency. You will also be able to read the writing on the image of the transparency. You may have had a similar experience if you have attached a transparent decal with words on it to the rear window of your car. If the decal can be read from outside the car, you can also read it when looking into your rearview mirror from inside the car.

- Quick Quiz 36.1** You are standing approximately 2 m away from a mirror. The mirror has water spots on its surface. True or False: It is possible for you to see
- the water spots and your image both in focus at the same time.

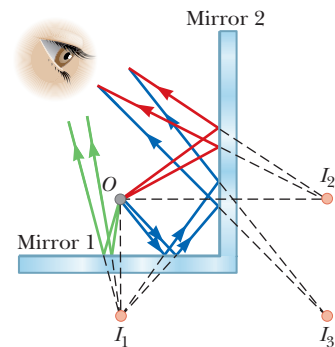
Conceptual Example 36.1 Multiple Images Formed by Two Mirrors

Two flat mirrors are perpendicular to each other as in Figure 36.4, and an object is placed at point O . In this situation, multiple images are formed. Locate the positions of these images.

SOLUTION

The image of the object is at I_1 in mirror 1 (green rays) and at I_2 in mirror 2 (red rays). In addition, a third image is formed at I_3 (blue rays). This third image is the image of I_1 in mirror 2 or, equivalently, the image of I_2 in mirror 1. That is, the image at I_1 (or I_2) serves as the object for I_3 . To form this image at I_3 , the rays reflect twice after leaving the object at O .

Figure 36.4 (Conceptual Example 36.1) When an object is placed in front of two mutually perpendicular mirrors as shown, three images are formed. Follow the different-colored light rays to understand the formation of each image.



Conceptual Example 36.2 The Tilting Rearview Mirror

Most rearview mirrors in cars have a day setting and a night setting. The night setting greatly diminishes the intensity of the image so that lights from trailing vehicles do not temporarily blind the driver. How does such a mirror work?

SOLUTION

Figure 36.5 shows a cross-sectional view of a rearview mirror for each setting. The unit consists of a reflective coating on the back of a wedge of glass. In the day setting (Fig. 36.5a), the light from an object behind the car strikes the glass wedge at point 1. Most of the light enters the wedge, refracting as it crosses the front surface, and reflects from the back surface to return to the front surface, where it is refracted again as it re-enters the air as ray B (for *bright*). In addition, a small portion of the light is reflected at the front surface of the glass as indicated by ray D (for *dim*).

This dim reflected light is responsible for the image observed when the mirror is in the night setting (Fig. 36.5b). In that case, the wedge is rotated so that the path followed by the bright light (ray B) does not lead to the eye. Instead, the dim light reflected from the front surface of the wedge travels to the eye, and the brightness of trailing headlights does not become a hazard.

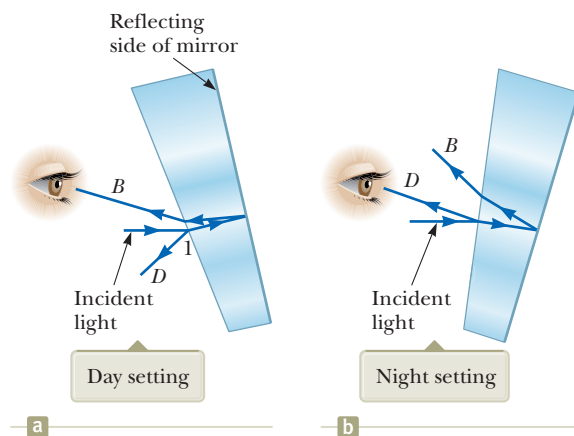


Figure 36.5 (Conceptual Example 36.2) Cross-sectional views of a rearview mirror.

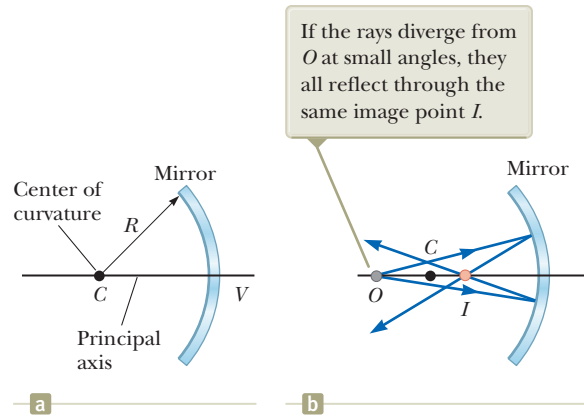


Figure 36.6 (a) A concave mirror of radius R . The center of curvature C is located on the principal axis. (b) A point object placed at O in front of a concave spherical mirror of radius R , where O is any point on the principal axis farther than R from the mirror surface, forms a real image at I .

36.2 Images Formed by Spherical Mirrors

In the preceding section, we considered images formed by flat mirrors. Now we study images formed by curved mirrors. Although a variety of curvatures are possible, we will restrict our investigation to spherical mirrors. As its name implies, a **spherical mirror** has the shape of a section of a sphere.

Concave Mirrors

We first consider reflection of light from the inner, concave surface of a spherical mirror as shown in Figure 36.6. This type of reflecting surface is called a **concave mirror**. Figure 36.6a shows that the mirror has a radius of curvature R , and its center of curvature is point C . Point V is the center of the spherical section, and a line through C and V is called the **principal axis** of the mirror. Figure 36.6a shows a cross section of a spherical mirror, with its surface represented by the solid, curved dark blue line. (The lighter blue band represents the structural support for the mirrored surface, such as a curved piece of glass on which a silvered reflecting surface is deposited.) This type of mirror focuses incoming parallel rays to a point as demonstrated by the yellow light rays in Figure 36.7.

Now consider a point source of light placed at point O in Figure 36.6b, where O is any point on the principal axis to the left of C . Two diverging light rays that originate at O are shown. After reflecting from the mirror, these rays converge and cross at the image point I . They then continue to diverge from I as if an object were there. As a result, the image at point I is real.

In this section, we shall consider only rays that diverge from the object and make a small angle with the principal axis. Such rays are called **paraxial rays**. All paraxial rays reflect through the image point as shown in Figure 36.6b. Rays that are far from the principal axis such as those shown in Figure 36.8 converge to other points on the principal axis, producing a blurred image. This effect, called *spherical aberration*, is present to some extent for any spherical mirror and is discussed in Section 36.5.

If the object distance p and radius of curvature R are known, we can use Figure 36.9 (page 1094) to calculate the image distance q . By convention, these distances are measured from point V . Figure 36.9 shows two rays leaving the tip of the object. The red ray passes through the center of curvature C of the mirror, hitting the mirror perpendicular to the mirror surface and reflecting back on itself. The blue ray strikes the mirror at its center (point V) and reflects as shown, obeying the law of reflection. The image of the tip of the arrow is located at the point where these two rays intersect. From the large, red right triangle in Figure 36.9, we see that $\tan \theta = h/p$, and from the yellow right triangle, we see that $\tan \theta = -h'/q$. The




Figure 36.7 Reflection of parallel rays from a concave mirror.

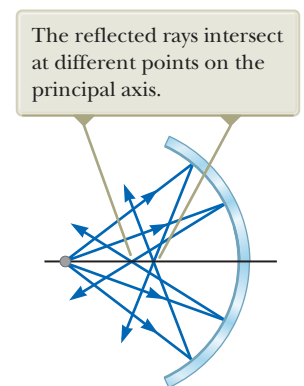


Figure 36.8 A spherical concave mirror exhibits spherical aberration when light rays make large angles with the principal axis.

Pitfall Prevention 36.1

Magnification Does Not Necessarily Imply Enlargement For optical elements other than flat mirrors, the magnification defined in Equation 36.2 can result in a number with a magnitude larger or smaller than 1. Therefore, despite the cultural usage of the word *magnification* to mean *enlargement*, the image could be smaller than the object.

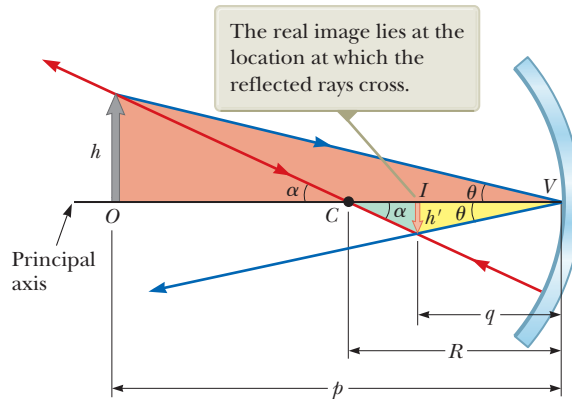


Figure 36.9 The image formed by a spherical concave mirror when the object O lies outside the center of curvature C . This geometric construction is used to derive Equation 36.4.



© iStockphoto.com/Maria Barski

A satellite-dish antenna is a concave reflector for television signals from a satellite in orbit around the Earth. Because the satellite is so far away, the signals are carried by microwaves that are parallel when they arrive at the dish. These waves reflect from the dish and are focused on the receiver.

negative sign is introduced because the image is inverted, so h' is taken to be negative. Therefore, from Equation 36.1 and these results, we find that the magnification of the image is

$$M = \frac{h'}{h} = -\frac{q}{p} \quad (36.2)$$

Also notice from the green right triangle in Figure 36.9 and the smaller red right triangle that

$$\tan \alpha = \frac{-h'}{R - q} \quad \text{and} \quad \tan \alpha = \frac{h}{p - R}$$

from which it follows that

$$\frac{h'}{h} = -\frac{R - q}{p - R} \quad (36.3)$$

Comparing Equations 36.2 and 36.3 gives

$$\frac{R - q}{p - R} = \frac{q}{p}$$

Simple algebra reduces this expression to

$$\frac{1}{p} + \frac{1}{q} = \frac{2}{R} \quad (36.4)$$

which is called the *mirror equation*. We present a modified version of this equation shortly.

If the object is very far from the mirror—that is, if p is so much greater than R that p can be said to approach infinity—then $1/p \approx 0$, and Equation 36.4 shows that $q \approx R/2$. That is, when the object is very far from the mirror, the image point is halfway between the center of curvature and the center point on the mirror as shown in Figure 36.10. The incoming rays from the object are essentially parallel in this figure because the source is assumed to be very far from the mirror. The image point in this special case is called the **focal point** F , and the image distance is called the **focal length** f , where

$$f = \frac{R}{2} \quad (36.5)$$

The focal point is a distance f from the mirror, as noted in Figure 36.10. In Figure 36.7, the beams are traveling parallel to the principal axis and the mirror reflects all beams to the focal point.

Mirror equation in terms of radius of curvature ▶

Focal length ▶

When the object is very far away, the image distance $q \approx R/2 = f$, where f is the focal length of the mirror.

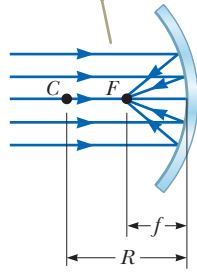


Figure 36.10 Light rays from a distant object ($p \rightarrow \infty$) reflect from a concave mirror through the focal point F .

Pitfall Prevention 36.2

The Focal Point Is Not the Focus Point The focal point *is usually not* the point at which the light rays focus to form an image. The focal point is determined solely by the curvature of the mirror; it does not depend on the location of the object. In general, an image forms at a point different from the focal point of a mirror (or a lens), as in Figure 36.9. The *only* exception is when the object is located infinitely far away from the mirror.

Because the focal length is a parameter particular to a given mirror, it can be used to compare one mirror with another. Combining Equations 36.4 and 36.5, the **mirror equation** can be expressed in terms of the focal length:

$$\frac{1}{p} + \frac{1}{q} = \frac{1}{f} \quad (36.6)$$

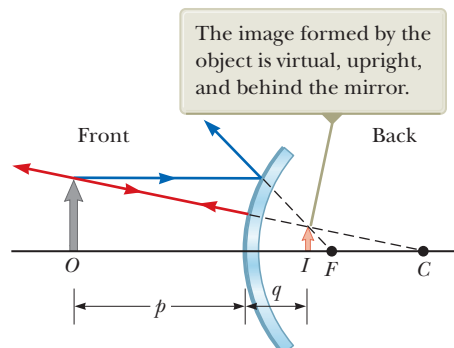
◀ Mirror equation in terms of focal length

Notice that the focal length of a mirror depends only on the curvature of the mirror and not on the material from which the mirror is made because the formation of the image results from rays reflected from the surface of the material. The situation is different for lenses; in that case, the light actually passes through the material and the focal length depends on the type of material from which the lens is made. (See Section 36.4.)

Convex Mirrors

Figure 36.11 shows the formation of an image by a **convex mirror**, that is, one silvered so that light is reflected from the outer, convex surface. It is sometimes called a **diverging mirror** because the rays from any point on an object diverge after reflection as though they were coming from some point behind the mirror. The image in Figure 36.11 is virtual because the reflected rays only appear to originate at the image point as indicated by the dashed lines. Furthermore, the image is always upright and smaller than the object. This type of mirror is often used in stores to foil shoplifters. A single mirror can be used to survey a large field of view because it forms a smaller image of the interior of the store.

We do not derive any equations for convex spherical mirrors because Equations 36.2, 36.4, and 36.6 can be used for either concave or convex mirrors if we adhere to a strict sign convention. We will refer to the region in which light rays originate and move toward the mirror as the *front side* of the mirror and the other side as the



The image formed by the object is virtual, upright, and behind the mirror.

Figure 36.11 Formation of an image by a spherical convex mirror.

Pitfall Prevention 36.3

Watch Your Signs Success in working mirror problems (as well as problems involving refracting surfaces and thin lenses) is largely determined by proper sign choices when substituting into the equations. The best way to success is to work a multitude of problems on your own.

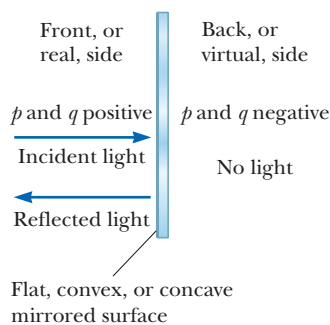


Figure 36.12 Signs of p and q for all types of mirrors.

Pitfall Prevention 36.4**Choose a Small Number of Rays**

A *huge* number of light rays leave each point on an object (and pass through each point on an image). In a ray diagram, which displays the characteristics of the image, we choose only a few rays that follow simply stated rules. Locating the image by calculation complements the diagram.

Table 36.1 Sign Conventions for Mirrors

Quantity	Positive When . . .	Negative When . . .
Object location (p)	object is in front of mirror (real object).	object is in back of mirror (virtual object).
Image location (q)	image is in front of mirror (real image).	image is in back of mirror (virtual image).
Image height (h')	image is upright.	image is inverted.
Focal length (f) and radius (R)	mirror is concave.	mirror is convex.
Magnification (M)	image is upright.	image is inverted.

back side. For example, in Figures 36.9 and 36.11, the side to the left of the mirrors is the front side and the side to the right of the mirrors is the back side. Figure 36.12 states the sign conventions for object and image distances for any type of mirror, and Table 36.1 summarizes the sign conventions for all quantities. One entry in the table, a *virtual object*, is formally introduced in Section 36.4.

Ray Diagrams for Mirrors

The positions and sizes of images formed by mirrors can be conveniently determined with *ray diagrams*. These pictorial representations reveal the nature of the image and can be used to check results calculated from the mathematical representation using the mirror and magnification equations. To draw a ray diagram, you must know the position of the object and the locations of the mirror's focal point and center of curvature. You then draw three rays to locate the image as shown by the examples in Figure 36.13. These rays all start from the same object point and are drawn as follows. You may choose any point on the object; here, let's choose the top of the object for simplicity. For concave mirrors (see Figs. 36.13a and 36.13b), draw the following three rays:

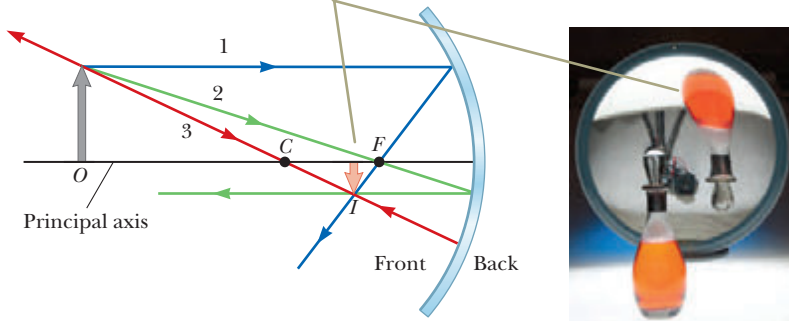
- Ray 1 is drawn from the top of the object parallel to the principal axis and is reflected through the focal point F .
- Ray 2 is drawn from the top of the object through the focal point (or as if coming from the focal point if $p < f$) and is reflected parallel to the principal axis.
- Ray 3 is drawn from the top of the object through the center of curvature C (or as if coming from the center C if $p < 2f$) and is reflected back on itself.

The intersection of any two of these rays locates the image. The third ray serves as a check of the construction. The image point obtained in this fashion must always agree with the value of q calculated from the mirror equation. With concave mirrors, notice what happens as the object is moved closer to the mirror. The real, inverted image in Figure 36.13a moves to the left and becomes larger as the object approaches the focal point. When the object is at the focal point, the image is infinitely far to the left. When the object lies between the focal point and the mirror surface as shown in Figure 36.13b, however, the image is to the right, behind the object, and virtual, upright, and enlarged. This latter situation applies when you use a shaving mirror or a makeup mirror, both of which are concave. Your face is closer to the mirror than the focal point, and you see an upright, enlarged image of your face.

For convex mirrors (see Fig. 36.13c), draw the following three rays:

- Ray 1 is drawn from the top of the object parallel to the principal axis and is reflected *away from* the focal point F .

When the object is located so that the center of curvature lies between the object and a concave mirror surface, the image is real, inverted, and reduced in size.

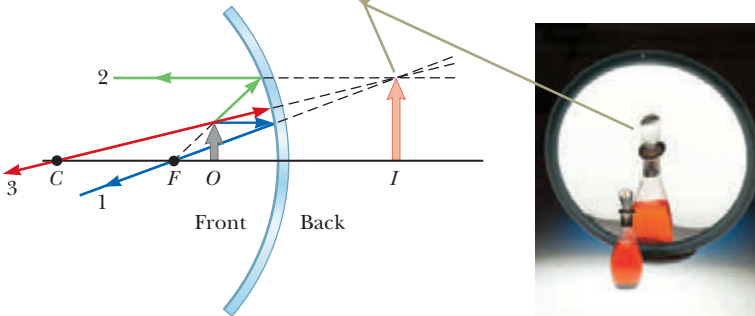


© Cengage Learning/Charles D. Winters

Figure 36.13 Ray diagrams for spherical mirrors along with corresponding photographs of the images of bottles.

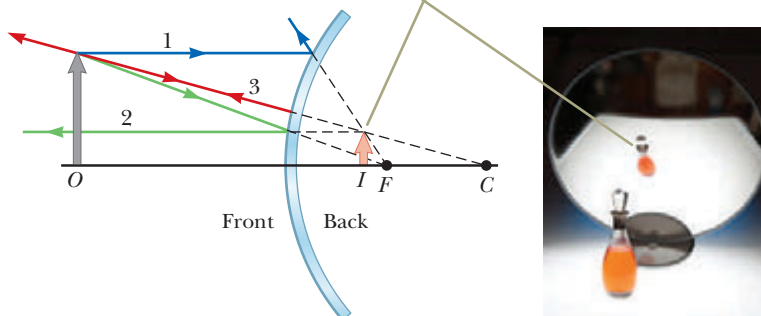
a

When the object is located between the focal point and a concave mirror surface, the image is virtual, upright, and enlarged.



b

When the object is in front of a convex mirror, the image is virtual, upright, and reduced in size.



c

- Ray 2 is drawn from the top of the object toward the focal point on the back side of the mirror and is reflected parallel to the principal axis.
- Ray 3 is drawn from the top of the object toward the center of curvature C on the back side of the mirror and is reflected back on itself.



Figure 36.14 (Quick Quiz 36.3) What type of mirror is shown here?

In a convex mirror, the image of an object is always virtual, upright, and reduced in size as shown in Figure 36.13c. In this case, as the object distance decreases, the virtual image increases in size and moves away from the focal point toward the mirror as the object approaches the mirror. You should construct other diagrams to verify how image position varies with object position.

Quick Quiz 36.2 You wish to start a fire by reflecting sunlight from a mirror onto some paper under a pile of wood. Which would be the best choice for the type of mirror? (a) flat (b) concave (c) convex

Quick Quiz 36.3 Consider the image in the mirror in Figure 36.14. Based on the appearance of this image, would you conclude that (a) the mirror is concave and the image is real, (b) the mirror is concave and the image is virtual, (c) the mirror is convex and the image is real, or (d) the mirror is convex and the image is virtual?

Example 36.3 The Image Formed by a Concave Mirror

A spherical mirror has a focal length of +10.0 cm.

(A) Locate and describe the image for an object distance of 25.0 cm.

SOLUTION

Conceptualize Because the focal length of the mirror is positive, it is a concave mirror (see Table 36.1). We expect the possibilities of both real and virtual images.

Categorize Because the object distance in this part of the problem is larger than the focal length, we expect the image to be real. This situation is analogous to that in Figure 36.13a.

Analyze Find the image distance by using Equation 36.6:

$$\frac{1}{q} = \frac{1}{f} - \frac{1}{p}$$

$$\frac{1}{q} = \frac{1}{10.0 \text{ cm}} - \frac{1}{25.0 \text{ cm}}$$

$$q = 16.7 \text{ cm}$$

Find the magnification of the image from Equation 36.2:

$$M = -\frac{q}{p} = -\frac{16.7 \text{ cm}}{25.0 \text{ cm}} = -0.667$$

Finalize The absolute value of M is less than unity, so the image is smaller than the object, and the negative sign for M tells us that the image is inverted. Because q is positive, the image is located on the front side of the mirror and is real. Look into the bowl of a shiny spoon or stand far away from a shaving mirror to see this image.

(B) Locate and describe the image for an object distance of 10.0 cm.

SOLUTION

Categorize Because the object is at the focal point, we expect the image to be infinitely far away.

Analyze Find the image distance by using Equation 36.6:

$$\frac{1}{q} = \frac{1}{f} - \frac{1}{p}$$

$$\frac{1}{q} = \frac{1}{10.0 \text{ cm}} - \frac{1}{10.0 \text{ cm}}$$

$$q = \infty$$

► 36.3 continued

Finalize This result means that rays originating from an object positioned at the focal point of a mirror are reflected so that the image is formed at an infinite distance from the mirror; that is, the rays travel parallel to one another after reflection. Such is the situation in a flashlight or an automobile headlight, where the bulb filament is placed at the focal point of a reflector, producing a parallel beam of light.

(C) Locate and describe the image for an object distance of 5.00 cm.

SOLUTION

Categorize Because the object distance is smaller than the focal length, we expect the image to be virtual. This situation is analogous to that in Figure 36.13b.

Analyze Find the image distance by using Equation 36.6:

$$\begin{aligned}\frac{1}{q} &= \frac{1}{f} - \frac{1}{p} \\ \frac{1}{q} &= \frac{1}{10.0 \text{ cm}} - \frac{1}{5.00 \text{ cm}} \\ q &= -10.0 \text{ cm}\end{aligned}$$

Find the magnification of the image from Equation 36.2:

$$M = -\frac{q}{p} = -\left(\frac{-10.0 \text{ cm}}{5.00 \text{ cm}}\right) = +2.00$$

Finalize The image is twice as large as the object, and the positive sign for M indicates that the image is upright (see Fig. 36.13b). The negative value of the image distance tells us that the image is virtual, as expected. Put your face close to a shaving mirror to see this type of image.

WHAT IF? Suppose you set up the bottle and mirror apparatus illustrated in Figure 36.13a and described here in part (A). While adjusting the apparatus, you accidentally bump the bottle and it begins to slide toward the mirror at speed v_p . How fast does the image of the bottle move?

Answer Solve the mirror equation, Equation 36.6, for q :

$$q = \frac{fp}{p-f}$$

Differentiate this equation with respect to time to find the velocity of the image:

$$(1) \quad v_q = \frac{dq}{dt} = \frac{d}{dt} \left(\frac{fp}{p-f} \right) = -\frac{f^2}{(p-f)^2} \frac{dp}{dt} = -\frac{f^2 v_p}{(p-f)^2}$$

Substitute numerical values from part (A):

$$v_q = -\frac{(10.0 \text{ cm})^2 v_p}{(25.0 \text{ cm} - 10.0 \text{ cm})^2} = -0.444 v_p$$

Therefore, the speed of the image is less than that of the object in this case.

We can see two interesting behaviors of the function for v_q in Equation (1). First, the velocity is negative regardless of the value of p or f . Therefore, if the object moves toward the mirror, the image moves toward the left in Figure 36.13 without regard for the side of the focal point at which the object is located or whether the mirror is concave or convex. Second, in the limit of $p \rightarrow 0$, the velocity v_q approaches $-v_p$. As the object moves very close to the mirror, the mirror looks like a plane mirror, the image is as far behind the mirror as the object is in front, and both the object and the image move with the same speed.

Example 36.4 The Image Formed by a Convex Mirror

An automobile rearview mirror as shown in Figure 36.15 (page 1100) shows an image of a truck located 10.0 m from the mirror. The focal length of the mirror is -0.60 m.

(A) Find the position of the image of the truck.

continued

▶ 36.4 continued

SOLUTION

Conceptualize This situation is depicted in Figure 36.13c.

Categorize Because the mirror is convex, we expect it to form an upright, reduced, virtual image for any object position.

Figure 36.15 (Example 36.4) An approaching truck is seen in a convex mirror on the right side of an automobile. Notice that the image of the truck is in focus, but the frame of the mirror is not, which demonstrates that the image is not at the same location as the mirror surface.



© Bo Zaunders/Cortis

Analyze Find the image distance by using Equation 36.6:

$$\frac{1}{q} = \frac{1}{f} - \frac{1}{p}$$

$$\frac{1}{q} = \frac{1}{-0.60 \text{ m}} - \frac{1}{10.0 \text{ m}}$$

$$q = -0.57 \text{ m}$$

(B) Find the magnification of the image.

SOLUTION

Analyze Use Equation 36.2:

$$M = -\frac{q}{p} = -\left(\frac{-0.57 \text{ m}}{10.0 \text{ m}}\right) = +0.057$$

Finalize The negative value of q in part (A) indicates that the image is virtual, or behind the mirror, as shown in Figure 36.13c. The magnification in part (B) indicates that the image is much smaller than the truck and is upright because M is positive. The image is reduced in size, so the truck appears to be farther away than it actually is. Because of the image's small size, these mirrors carry the inscription, "Objects in this mirror are closer than they appear." Look into your rearview mirror or the back side of a shiny spoon to see an image of this type.

36.3 Images Formed by Refraction

In this section, we describe how images are formed when light rays follow the wave under refraction model at the boundary between two transparent materials. Consider two transparent media having indices of refraction n_1 and n_2 , where the boundary between the two media is a spherical surface of radius R (Fig. 36.16). We assume the object at O is in the medium for which the index of refraction is n_1 . Let's consider the paraxial rays leaving O . As we shall see, all such rays are refracted at the spherical surface and focus at a single point I , the image point.

Figure 36.17 shows a single ray leaving point O and refracting to point I . Snell's law of refraction applied to this ray gives

$$n_1 \sin \theta_1 = n_2 \sin \theta_2$$

Because θ_1 and θ_2 are assumed to be small, we can use the small-angle approximation $\sin \theta \approx \theta$ (with angles in radians) and write Snell's law as

$$n_1 \theta_1 = n_2 \theta_2$$

We know that an exterior angle of any triangle equals the sum of the two opposite interior angles, so applying this rule to triangles OPC and PIC in Figure 36.17 gives

$$\theta_1 = \alpha + \beta$$

$$\beta = \theta_2 + \gamma$$

Rays making small angles with the principal axis diverge from a point object at O and are refracted through the image point I .

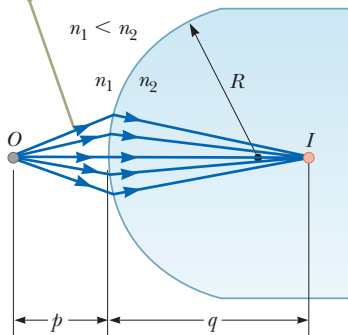


Figure 36.16 An image formed by refraction at a spherical surface.

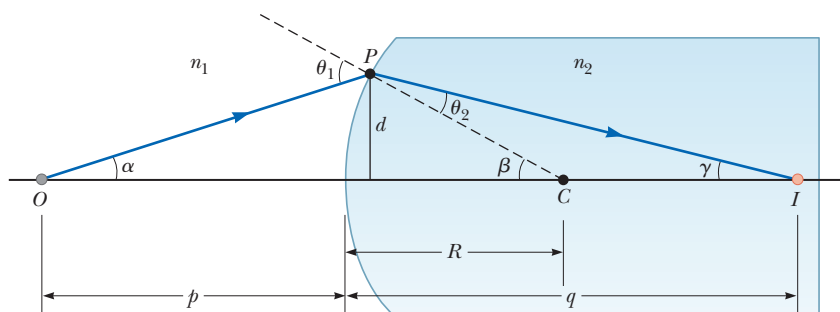


Figure 36.17 Geometry used to derive Equation 36.8, assuming $n_1 < n_2$.

Combining all three expressions and eliminating θ_1 and θ_2 gives

$$n_1\alpha + n_2\gamma = (n_2 - n_1)\beta \quad (36.7)$$

Figure 36.17 shows three right triangles that have a common vertical leg of length d . For paraxial rays (unlike the relatively large-angle ray shown in Fig. 36.17), the horizontal legs of these triangles are approximately p for the triangle containing angle α , R for the triangle containing angle β , and q for the triangle containing angle γ . In the small-angle approximation, $\tan \theta \approx \theta$, so we can write the approximate relationships from these triangles as follows:

$$\tan \alpha \approx \alpha \approx \frac{d}{p} \quad \tan \beta \approx \beta \approx \frac{d}{R} \quad \tan \gamma \approx \gamma \approx \frac{d}{q}$$

Substituting these expressions into Equation 36.7 and dividing through by d gives

$$\frac{n_1}{p} + \frac{n_2}{q} = \frac{n_2 - n_1}{R} \quad (36.8)$$

◀ Relation between object and image distance for a refracting surface

For a fixed object distance p , the image distance q is independent of the angle the ray makes with the axis. This result tells us that all paraxial rays focus at the same point I .

As with mirrors, we must use a sign convention to apply Equation 36.8 to a variety of cases. We define the side of the surface in which light rays originate as the front side. The other side is called the back side. In contrast with mirrors, where real images are formed in front of the reflecting surface, real images are formed by refraction of light rays to the back of the surface. Because of the difference in location of real images, the refraction sign conventions for q and R are opposite the reflection sign conventions. For example, q and R are both positive in Figure 36.17. The sign conventions for spherical refracting surfaces are summarized in Table 36.2.

We derived Equation 36.8 from an assumption that $n_1 < n_2$ in Figure 36.17. This assumption is not necessary, however. Equation 36.8 is valid regardless of which index of refraction is greater.

Table 36.2 Sign Conventions for Refracting Surfaces

Quantity	Positive When . . .	Negative When . . .
Object location (p)	object is in front of surface (real object).	object is in back of surface (virtual object).
Image location (q)	image is in back of surface (real image).	image is in front of surface (virtual image).
Image height (h')	image is upright.	image is inverted.
Radius (R)	center of curvature is in back of surface.	center of curvature is in front of surface.

The image is virtual and on the same side of the surface as the object.

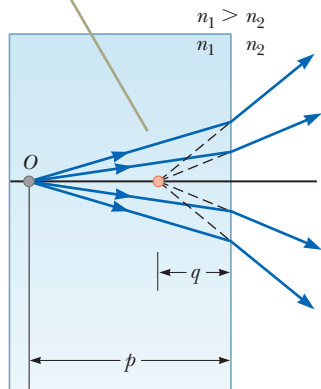


Figure 36.18 The image formed by a flat refracting surface. All rays are assumed to be paraxial.

Flat Refracting Surfaces

If a refracting surface is flat, then R is infinite and Equation 36.8 reduces to

$$\frac{n_1}{p} = -\frac{n_2}{q}$$

$$q = -\frac{n_2}{n_1}p \quad (36.9)$$

From this expression, we see that the sign of q is opposite that of p . Therefore, according to Table 36.2, the image formed by a flat refracting surface is on the same side of the surface as the object as illustrated in Figure 36.18 for the situation in which the object is in the medium of index n_1 and n_1 is greater than n_2 . In this case, a virtual image is formed between the object and the surface. If n_1 is less than n_2 , the rays on the back side diverge from one another at smaller angles than those in Figure 36.18. As a result, the virtual image is formed to the left of the object.

Quick Quiz 36.4 In Figure 36.16, what happens to the image point I as the object point O is moved to the right from very far away to very close to the refracting surface? (a) It is always to the right of the surface. (b) It is always to the left of the surface. (c) It starts off to the left, and at some position of O , I moves to the right of the surface. (d) It starts off to the right, and at some position of O , I moves to the left of the surface.

Quick Quiz 36.5 In Figure 36.18, what happens to the image point I as the object point O moves toward the right-hand surface of the material of index of refraction n_1 ? (a) It always remains between O and the surface, arriving at the surface just as O does. (b) It moves toward the surface more slowly than O so that eventually O passes I . (c) It approaches the surface and then moves to the right of the surface.

Conceptual Example 36.5

Let's Go Scuba Diving!

Objects viewed under water with the naked eye appear blurred and out of focus. A scuba diver using a mask, however, has a clear view of underwater objects. Explain how that works, using the information that the indices of refraction of the cornea, water, and air are 1.376, 1.333, and 1.000 29, respectively.

SOLUTION

Because the cornea and water have almost identical indices of refraction, very little refraction occurs when a person under water views objects with the naked eye. In this case, light rays from an object focus behind the retina, resulting in a blurred image. When a mask is used, however, the air space between the eye and the mask surface provides the normal amount of refraction at the eye–air interface; consequently, the light from the object focuses on the retina.

Example 36.6

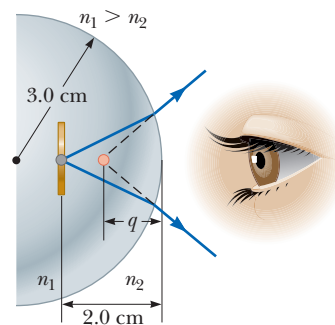
Gaze into the Crystal Ball

A set of coins is embedded in a spherical plastic paperweight having a radius of 3.0 cm. The index of refraction of the plastic is $n_1 = 1.50$. One coin is located 2.0 cm from the edge of the sphere (Fig. 36.19). Find the position of the image of the coin.

SOLUTION

Conceptualize Because $n_1 > n_2$, where $n_2 = 1.00$ is the index of refraction for air, the rays originating from the coin in Figure 36.19 are refracted away from the normal at the surface and diverge outward. Extending the outgoing rays backward shows an image point within the sphere.

Figure 36.19 (Example 36.6) Light rays from a coin embedded in a plastic sphere form a virtual image between the surface of the object and the sphere surface. Because the object is inside the sphere, the front of the refracting surface is the interior of the sphere.



36.6 continued

Categorize Because the light rays originate in one material and then pass through a curved surface into another material, this example involves an image formed by refraction.

Analyze Apply Equation 36.8, noting from Table 36.2 that R is negative:

Substitute numerical values and solve for q :

$$\frac{n_2}{q} = \frac{n_2 - n_1}{R} - \frac{n_1}{p}$$

$$\frac{1}{q} = \frac{1.00 - 1.50}{-3.0 \text{ cm}} - \frac{1.50}{2.0 \text{ cm}}$$

$$q = -1.7 \text{ cm}$$

Finalize The negative sign for q indicates that the image is in front of the surface; in other words, it is in the same medium as the object as shown in Figure 36.19. Therefore, the image must be virtual. (See Table 36.2.) The coin appears to be closer to the paperweight surface than it actually is.

Example 36.7 The One That Got Away

A small fish is swimming at a depth d below the surface of a pond (Fig. 36.20).

(A) What is the apparent depth of the fish as viewed from directly overhead?

SOLUTION

Conceptualize Because $n_1 > n_2$, where $n_2 = 1.00$ is the index of refraction for air, the rays originating from the fish in Figure 36.20a are refracted away from the normal at the surface and diverge outward. Extending the outgoing rays backward shows an image point under the water.

Categorize Because the refracting surface is flat, R is infinite. Hence, we can use Equation 36.9 to determine the location of the image with $p = d$.

Analyze Use the indices of refraction given in Figure 36.20a in Equation 36.9:

$$q = -\frac{n_2}{n_1} p = -\frac{1.00}{1.33} d = -0.752d$$

Finalize Because q is negative, the image is virtual as indicated by the dashed lines in Figure 36.20a. The apparent depth is approximately three-fourths the actual depth.

(B) If your face is a distance d above the water surface, at what apparent distance above the surface does the fish see your face?

SOLUTION

Conceptualize The light rays from your face are shown in Figure 36.20b. Because the rays refract toward the normal, your face appears higher above the surface than it actually is.

Categorize Because the refracting surface is flat, R is infinite. Hence, we can use Equation 36.9 to determine the location of the image with $p = d$.

Analyze Use Equation 36.9 to find the image distance:

$$q = -\frac{n_2}{n_1} p = -\frac{1.33}{1.00} d = -1.33d$$

Finalize The negative sign for q indicates that the image is in the medium from which the light originated, which is the air above the water.

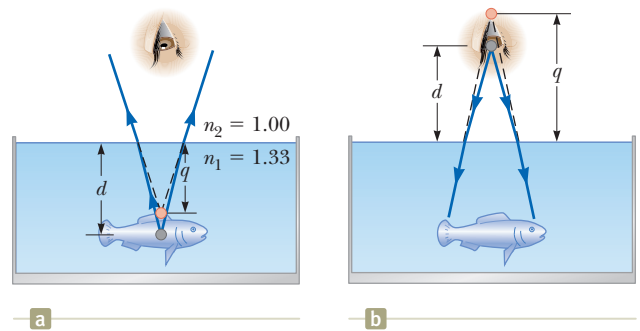


Figure 36.20 (Example 36.7) (a) The apparent depth q of the fish is less than the true depth d . All rays are assumed to be paraxial. (b) Your face appears to the fish to be higher above the surface than it is.

continued

36.7 continued

WHAT IF? What if you look more carefully at the fish and measure its apparent *height* from its upper fin to its lower fin? Is the apparent height h' of the fish different from the actual height h ?

Answer Because all points on the fish appear to be fractionally closer to the observer, we expect the height to be smaller. Let the distance d in Figure 36.20a be measured to the top fin and let the distance to the bottom fin be $d + h$. Then the images of the top and bottom of the fish are located at

$$q_{\text{top}} = -0.752d$$

$$q_{\text{bottom}} = -0.752(d + h)$$

The apparent height h' of the fish is

$$h' = q_{\text{top}} - q_{\text{bottom}} = -0.752d - [-0.752(d + h)] = 0.752h$$

Hence, the fish appears to be approximately three-fourths its actual height.

36.4 Images Formed by Thin Lenses

Lenses are commonly used to form images by refraction in optical instruments such as cameras, telescopes, and microscopes. Let's use what we just learned about images formed by refracting surfaces to help locate the image formed by a lens. Light passing through a lens experiences refraction at two surfaces. The development we shall follow is based on the notion that the image formed by one refracting surface serves as the object for the second surface. We shall analyze a thick lens first and then let the thickness of the lens be approximately zero.

Consider a lens having an index of refraction n and two spherical surfaces with radii of curvature R_1 and R_2 as in Figure 36.21. (Notice that R_1 is the radius of curvature of the lens surface the light from the object reaches first and R_2 is the radius of curvature of the other surface of the lens.) An object is placed at point O at a distance p_1 in front of surface 1.

Let's begin with the image formed by surface 1. Using Equation 36.8 and assuming $n_1 = 1$ because the lens is surrounded by air, we find that the image I_1 formed by surface 1 satisfies the equation

$$\frac{1}{p_1} + \frac{n}{q_1} = \frac{n - 1}{R_1} \quad (36.10)$$

where q_1 is the position of the image formed by surface 1. If the image formed by surface 1 is virtual (Fig. 36.21a), then q_1 is negative; it is positive if the image is real (Fig. 36.21b).

Now let's apply Equation 36.8 to surface 2, taking $n_1 = n$ and $n_2 = 1$. (We make this switch in index because the light rays approaching surface 2 are *in the material of the lens*, and this material has index n .) Taking p_2 as the object distance for surface 2 and q_2 as the image distance gives

$$\frac{n}{p_2} + \frac{1}{q_2} = \frac{1 - n}{R_2} \quad (36.11)$$

We now introduce mathematically that the image formed by the first surface acts as the object for the second surface. If the image from surface 1 is virtual as in Figure 36.21a, we see that p_2 , measured from surface 2, is related to q_1 as $p_2 = -q_1 + t$, where t is the thickness of the lens. Because q_1 is negative, p_2 is a positive number. Figure 36.21b shows the case of the image from surface 1 being real. In this situation, q_1 is positive and $p_2 = -q_1 + t$, where the image from surface 1 acts as a **virtual object**, so p_2 is negative. Regardless of the type of image from surface 1, the same equation describes the location of the object for surface 2 based on our sign

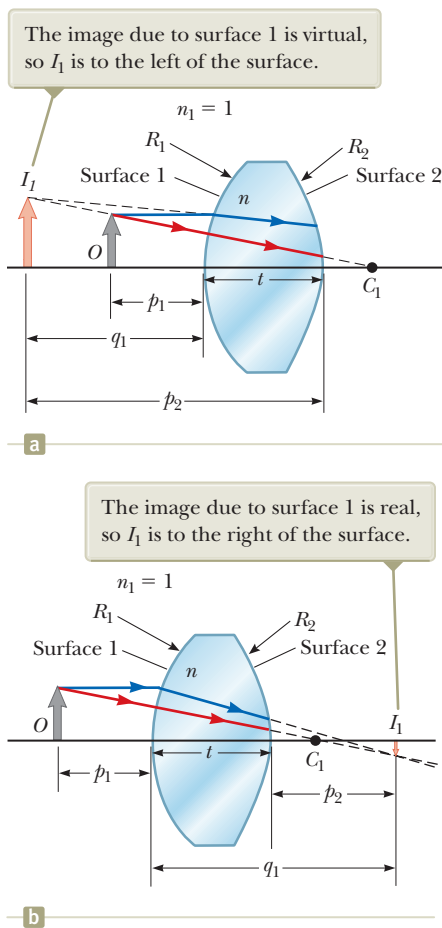


Figure 36.21 To locate the image formed by a lens, we use the virtual image at I_1 formed by surface 1 as the object for the image formed by surface 2. The point C_1 is the center of curvature of surface 1.

convention. For a *thin* lens (one whose thickness is small compared with the radii of curvature), we can neglect t . In this approximation, $p_2 = -q_1$ for either type of image from surface 1. Hence, Equation 36.11 becomes

$$-\frac{n}{q_1} + \frac{1}{q_2} = \frac{1-n}{R_2} \quad (36.12)$$

Adding Equations 36.10 and 36.12 gives

$$\frac{1}{p_1} + \frac{1}{q_2} = (n-1)\left(\frac{1}{R_1} - \frac{1}{R_2}\right) \quad (36.13)$$

For a thin lens, we can omit the subscripts on p_1 and q_2 in Equation 36.13 and call the object distance p and the image distance q as in Figure 36.22. Hence, we can write Equation 36.13 as

$$\frac{1}{p} + \frac{1}{q} = (n-1)\left(\frac{1}{R_1} - \frac{1}{R_2}\right) \quad (36.14)$$

This expression relates the image distance q of the image formed by a thin lens to the object distance p and to the lens properties (index of refraction and radii of curvature). It is valid only for paraxial rays and only when the lens thickness is much less than R_1 and R_2 .

The **focal length** f of a thin lens is the image distance that corresponds to an infinite object distance, just as with mirrors. Letting p approach ∞ and q approach f in Equation 36.14, we see that the inverse of the focal length for a thin lens is

$$\frac{1}{f} = (n-1)\left(\frac{1}{R_1} - \frac{1}{R_2}\right) \quad (36.15)$$

This relationship is called the **lens-makers' equation** because it can be used to determine the values of R_1 and R_2 needed for a given index of refraction and a desired focal length f . Conversely, if the index of refraction and the radii of curvature of a lens are given, this equation can be used to find the focal length. If the lens is immersed in something other than air, this same equation can be used, with n interpreted as the *ratio* of the index of refraction of the lens material to that of the surrounding fluid.

Using Equation 36.15, we can write Equation 36.14 in a form identical to Equation 36.6 for mirrors:

$$\frac{1}{p} + \frac{1}{q} = \frac{1}{f} \quad (36.16)$$

This equation, called the **thin lens equation**, can be used to relate the image distance and object distance for a thin lens.

Because light can travel in either direction through a lens, each lens has two focal points, one for light rays passing through in one direction and one for rays passing through in the other direction. These two focal points are illustrated in Figure 36.23 for a plano-convex lens (a converging lens) and a plano-concave lens (a diverging lens).

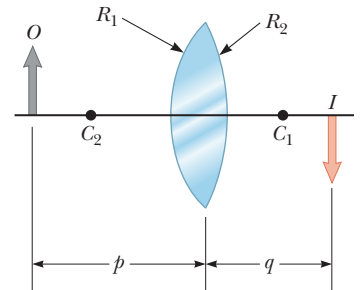
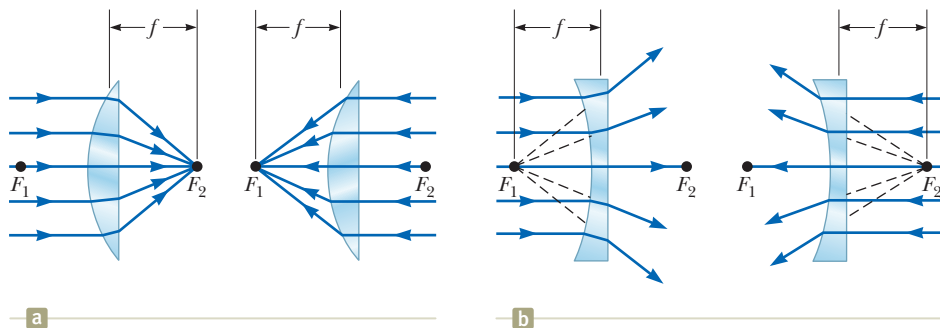


Figure 36.22 Simplified geometry for a thin lens.

◀ Lens-makers' equation

Pitfall Prevention 36.5

A Lens Has Two Focal Points but Only One Focal Length A lens has a focal point on each side, front and back. There is only one focal length, however; each of the two focal points is located the same distance from the lens (Fig. 36.23). As a result, the lens forms an image of an object at the same point if it is turned around. In practice, that might not happen because real lenses are not infinitesimally thin.

Figure 36.23 Parallel light rays pass through (a) a converging lens and (b) a diverging lens. The focal length is the same for light rays passing through a given lens in either direction. Both focal points F_1 and F_2 are the same distance from the lens.

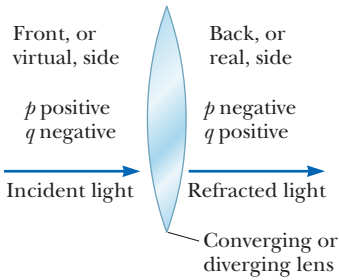


Figure 36.24 A diagram for obtaining the signs of p and q for a thin lens. (This diagram also applies to a refracting surface.)

Table 36.3 Sign Conventions for Thin Lenses

Quantity	Positive When . . .	Negative When . . .
Object location (p)	object is in front of lens (real object).	object is in back of lens (virtual object).
Image location (q)	image is in back of lens (real image).	image is in front of lens (virtual image).
Image height (h')	image is upright.	image is inverted.
R_1 and R_2	center of curvature is in back of lens.	center of curvature is in front of lens.
Focal length (f)	a converging lens.	a diverging lens.

Figure 36.24 is useful for obtaining the signs of p and q , and Table 36.3 gives the sign conventions for thin lenses. These sign conventions are the *same* as those for refracting surfaces (see Table 36.2).

Various lens shapes are shown in Figure 36.25. Notice that a converging lens is thicker at the center than at the edge, whereas a diverging lens is thinner at the center than at the edge.

Magnification of Images

Consider a thin lens through which light rays from an object pass. As with mirrors (Eq. 36.2), a geometric construction shows that the lateral magnification of the image is

$$M = \frac{h'}{h} = -\frac{q}{p} \tag{36.17}$$

From this expression, it follows that when M is positive, the image is upright and on the same side of the lens as the object. When M is negative, the image is inverted and on the side of the lens opposite the object.

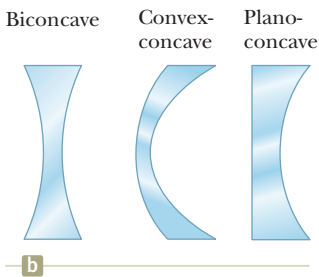
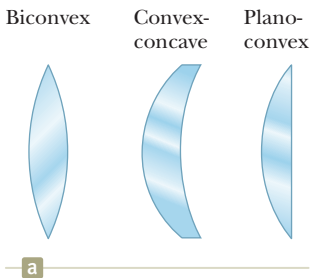


Figure 36.25 Various lens shapes. (a) Converging lenses have a positive focal length and are thickest at the middle. (b) Diverging lenses have a negative focal length and are thickest at the edges.

Ray Diagrams for Thin Lenses

Ray diagrams are convenient for locating the images formed by thin lenses or systems of lenses. They also help clarify our sign conventions. Figure 36.26 shows such diagrams for three single-lens situations.

To locate the image of a *converging* lens (Figs. 36.26a and 36.26b), the following three rays are drawn from the top of the object:

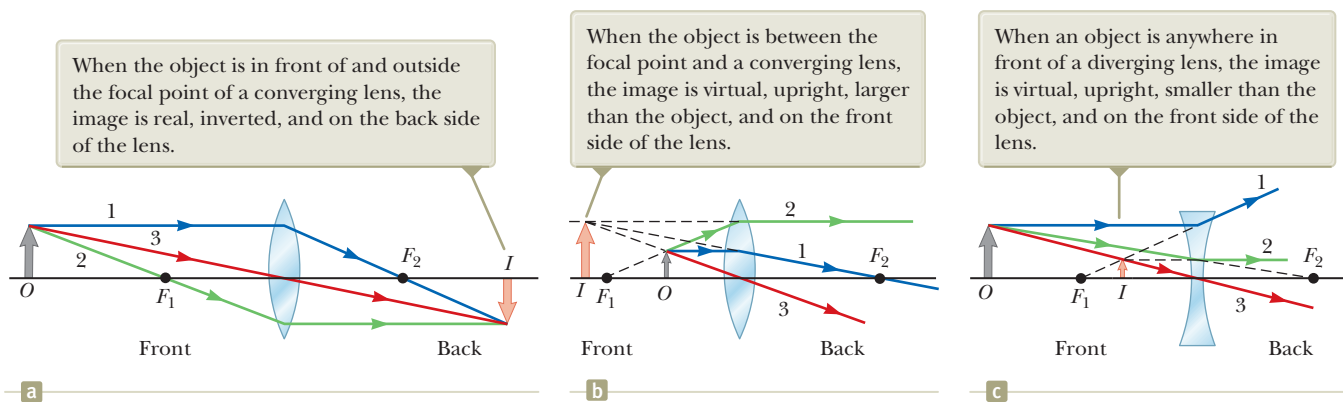


Figure 36.26 Ray diagrams for locating the image formed by a thin lens.

- Ray 1 is drawn parallel to the principal axis. After being refracted by the lens, this ray passes through the focal point on the back side of the lens.
- Ray 2 is drawn through the focal point on the front side of the lens (or as if coming from the focal point if $p < f$) and emerges from the lens parallel to the principal axis.
- Ray 3 is drawn through the center of the lens and continues in a straight line.

To locate the image of a *diverging* lens (Fig. 36.26c), the following three rays are drawn from the top of the object:

- Ray 1 is drawn parallel to the principal axis. After being refracted by the lens, this ray emerges directed away from the focal point on the front side of the lens.
- Ray 2 is drawn in the direction toward the focal point on the back side of the lens and emerges from the lens parallel to the principal axis.
- Ray 3 is drawn through the center of the lens and continues in a straight line.

For the converging lens in Figure 36.26a, where the object is to the left of the focal point ($p > f$), the image is real and inverted. When the object is between the focal point and the lens ($p < f$) as in Figure 36.26b, the image is virtual and upright. In that case, the lens acts as a magnifying glass, which we study in more detail in Section 36.8. For a diverging lens (Fig. 36.26c), the image is always virtual and upright, regardless of where the object is placed. These geometric constructions are reasonably accurate only if the distance between the rays and the principal axis is much less than the radii of the lens surfaces.

Refraction occurs only at the surfaces of the lens. A certain lens design takes advantage of this behavior to produce the *Fresnel lens*, a powerful lens without great thickness. Because only the surface curvature is important in the refracting qualities of the lens, material in the middle of a Fresnel lens is removed as shown in the cross sections of lenses in Figure 36.27. Because the edges of the curved segments cause some distortion, Fresnel lenses are generally used only in situations in which image quality is less important than reduction of weight. A classroom overhead projector often uses a Fresnel lens; the circular edges between segments of the lens can be seen by looking closely at the light projected onto a screen.

- Quick Quiz 36.6** What is the focal length of a pane of window glass? (a) zero
 • (b) infinity (c) the thickness of the glass (d) impossible to determine

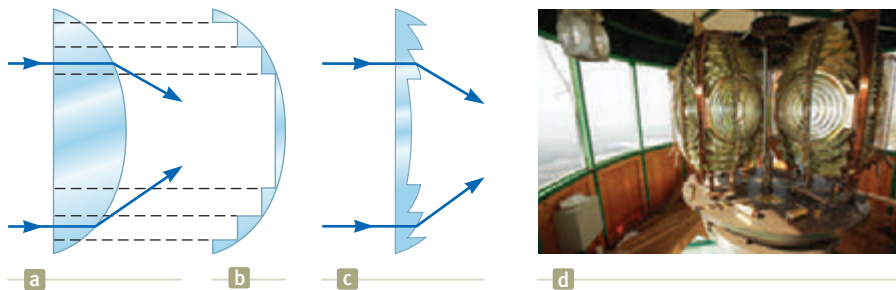


Figure 36.27 A side view of the construction of a Fresnel lens. (a) The thick lens refracts a light ray as shown. (b) Lens material in the bulk of the lens is cut away, leaving only the material close to the curved surface. (c) The small pieces of remaining material are moved to the left to form a flat surface on the left of the Fresnel lens with ridges on the right surface. From a front view, these ridges would be circular in shape. This new lens refracts light in the same way as the lens in (a). (d) A Fresnel lens used in a lighthouse shows several segments with the ridges discussed in (c).

Example 36.8 Images Formed by a Converging Lens

A converging lens has a focal length of 10.0 cm.

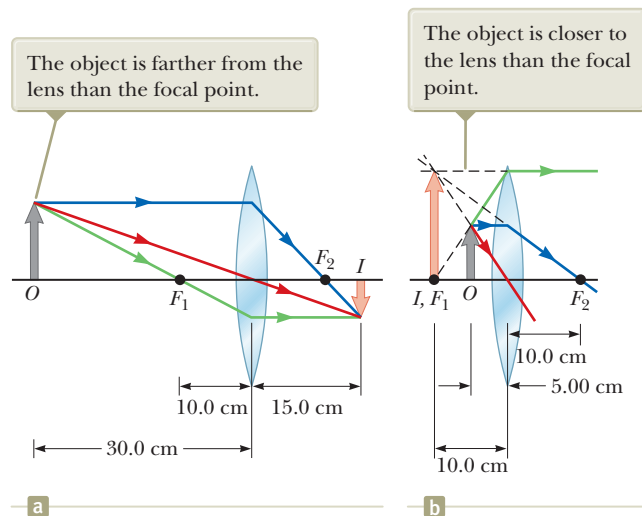
(A) An object is placed 30.0 cm from the lens. Construct a ray diagram, find the image distance, and describe the image.

SOLUTION

Conceptualize Because the lens is converging, the focal length is positive (see Table 36.3). We expect the possibilities of both real and virtual images.

Categorize Because the object distance is larger than the focal length, we expect the image to be real. The ray diagram for this situation is shown in Figure 36.28a.

Figure 36.28
(Example 36.8) An image is formed by a converging lens.



Analyze Find the image distance by using Equation 36.16:

$$\frac{1}{q} = \frac{1}{f} - \frac{1}{p}$$

$$\frac{1}{q} = \frac{1}{10.0 \text{ cm}} - \frac{1}{30.0 \text{ cm}}$$

$$q = +15.0 \text{ cm}$$

Find the magnification of the image from Equation 36.17:

$$M = -\frac{q}{p} = -\frac{15.0 \text{ cm}}{30.0 \text{ cm}} = -0.500$$

Finalize The positive sign for the image distance tells us that the image is indeed real and on the back side of the lens. The magnification of the image tells us that the image is reduced in height by one half, and the negative sign for M tells us that the image is inverted.

(B) An object is placed 10.0 cm from the lens. Find the image distance and describe the image.

SOLUTION

Categorize Because the object is at the focal point, we expect the image to be infinitely far away.

Analyze Find the image distance by using Equation 36.16:

$$\frac{1}{q} = \frac{1}{f} - \frac{1}{p}$$

$$\frac{1}{q} = \frac{1}{10.0 \text{ cm}} - \frac{1}{10.0 \text{ cm}}$$

$$q = \infty$$

Finalize This result means that rays originating from an object positioned at the focal point of a lens are refracted so that the image is formed at an infinite distance from the lens; that is, the rays travel parallel to one another after refraction.

(C) An object is placed 5.00 cm from the lens. Construct a ray diagram, find the image distance, and describe the image.

SOLUTION

Categorize Because the object distance is smaller than the focal length, we expect the image to be virtual. The ray diagram for this situation is shown in Figure 36.28b.

36.8 continued

Analyze Find the image distance by using Equation 36.16:

$$\frac{1}{q} = \frac{1}{f} - \frac{1}{p}$$

$$\frac{1}{q} = \frac{1}{10.0 \text{ cm}} - \frac{1}{5.00 \text{ cm}}$$

$$q = -10.0 \text{ cm}$$

Find the magnification of the image from Equation 36.17:

$$M = -\frac{q}{p} = -\left(\frac{-10.0 \text{ cm}}{5.00 \text{ cm}}\right) = +2.00$$

Finalize The negative image distance tells us that the image is virtual and formed on the side of the lens from which the light is incident, the front side. The image is enlarged, and the positive sign for M tells us that the image is upright.

WHAT IF? What if the object moves right up to the lens surface so that $p \rightarrow 0$? Where is the image?

Answer In this case, because $p \ll R$, where R is either of the radii of the surfaces of the lens, the curvature of the lens can be ignored. The lens should appear to have the same effect as a flat piece of material, which suggests that the image is just on the front side of the lens, at $q = 0$. This conclusion can be verified mathematically by rearranging the thin lens equation:

$$\frac{1}{q} = \frac{1}{f} - \frac{1}{p}$$

If we let $p \rightarrow 0$, the second term on the right becomes very large compared with the first and we can neglect $1/f$. The equation becomes

$$\frac{1}{q} = -\frac{1}{p} \rightarrow q = -p = 0$$

Therefore, q is on the front side of the lens (because it has the opposite sign as p) and right at the lens surface.

Example 36.9 Images Formed by a Diverging Lens

A diverging lens has a focal length of 10.0 cm.

(A) An object is placed 30.0 cm from the lens. Construct a ray diagram, find the image distance, and describe the image.

SOLUTION

Conceptualize Because the lens is diverging, the focal length is negative (see Table 36.3). The ray diagram for this situation is shown in Figure 36.29a.

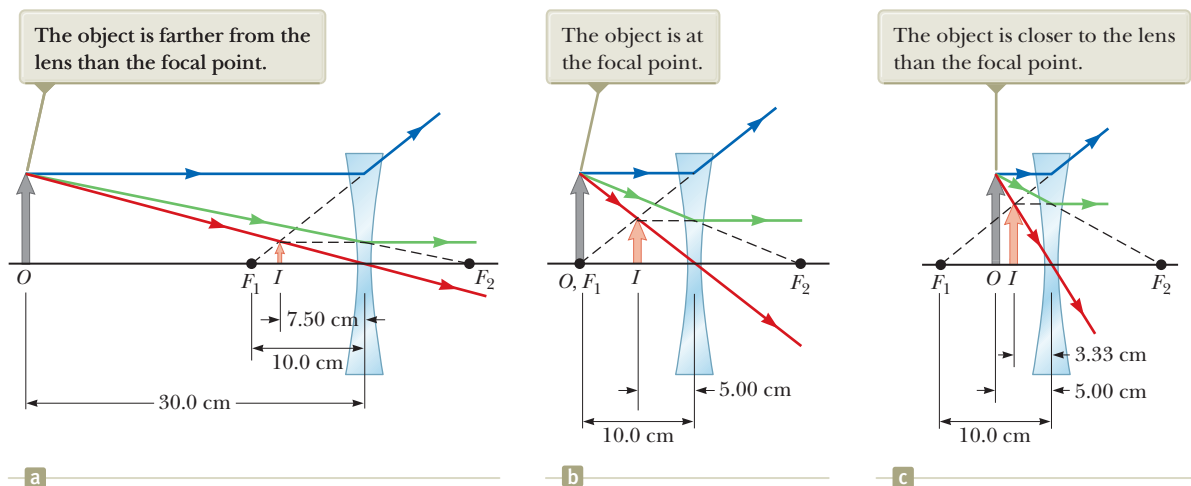


Figure 36.29 (Example 36.9) An image is formed by a diverging lens.

continued

▶ 36.9 continued

Categorize Because the lens is diverging, we expect it to form an upright, reduced, virtual image for any object position.

Analyze Find the image distance by using Equation 36.16:

$$\frac{1}{q} = \frac{1}{f} - \frac{1}{p}$$

$$\frac{1}{q} = \frac{1}{-10.0 \text{ cm}} - \frac{1}{30.0 \text{ cm}}$$

$$q = -7.50 \text{ cm}$$

Find the magnification of the image from Equation 36.17:

$$M = -\frac{q}{p} = -\left(\frac{-7.50 \text{ cm}}{30.0 \text{ cm}}\right) = +0.250$$

Finalize This result confirms that the image is virtual, smaller than the object, and upright. Look through the diverging lens in a door peephole to see this type of image.

(B) An object is placed 10.0 cm from the lens. Construct a ray diagram, find the image distance, and describe the image.

SOLUTION

The ray diagram for this situation is shown in Figure 36.29b.

Analyze Find the image distance by using Equation 36.16:

$$\frac{1}{q} = \frac{1}{f} - \frac{1}{p}$$

$$\frac{1}{q} = \frac{1}{-10.0 \text{ cm}} - \frac{1}{10.0 \text{ cm}}$$

$$q = -5.00 \text{ cm}$$

Find the magnification of the image from Equation 36.17:

$$M = -\frac{q}{p} = -\left(\frac{-5.00 \text{ cm}}{10.0 \text{ cm}}\right) = +0.500$$

Finalize Notice the difference between this situation and that for a converging lens. For a diverging lens, an object at the focal point does not produce an image infinitely far away.

(C) An object is placed 5.00 cm from the lens. Construct a ray diagram, find the image distance, and describe the image.

SOLUTION

The ray diagram for this situation is shown in Figure 36.29c.

Analyze Find the image distance by using Equation 36.16:

$$\frac{1}{q} = \frac{1}{f} - \frac{1}{p}$$

$$\frac{1}{q} = \frac{1}{-10.0 \text{ cm}} - \frac{1}{5.0 \text{ cm}}$$

$$q = -3.33 \text{ cm}$$

Find the magnification of the image from Equation 36.17:

$$M = -\left(\frac{-3.33 \text{ cm}}{5.00 \text{ cm}}\right) = +0.667$$

Finalize For all three object positions, the image position is negative and the magnification is a positive number smaller than 1, which confirms that the image is virtual, smaller than the object, and upright.

Combinations of Thin Lenses

If two thin lenses are used to form an image, the system can be treated in the following manner. First, the image formed by the first lens is located as if the second lens were not present. Then a ray diagram is drawn for the second lens, with the

image formed by the first lens now serving as the object for the second lens. The second image formed is the final image of the system. If the image formed by the first lens lies on the back side of the second lens, that image is treated as a virtual object for the second lens (that is, in the thin lens equation, p is negative). The same procedure can be extended to a system of three or more lenses. Because the magnification due to the second lens is performed on the magnified image due to the first lens, the overall magnification of the image due to the combination of lenses is the product of the individual magnifications:

$$M = M_1 M_2 \quad (36.18)$$

This equation can be used for combinations of any optical elements such as a lens and a mirror. For more than two optical elements, the magnifications due to all elements are multiplied together.

Let's consider the special case of a system of two lenses of focal lengths f_1 and f_2 in contact with each other. If $p_1 = p$ is the object distance for the combination, application of the thin lens equation (Eq. 36.16) to the first lens gives

$$\frac{1}{p} + \frac{1}{q_1} = \frac{1}{f_1}$$

where q_1 is the image distance for the first lens. Treating this image as the object for the second lens, we see that the object distance for the second lens must be $p_2 = -q_1$. (The distances are the same because the lenses are in contact and assumed to be infinitesimally thin. The object distance is negative because the object is virtual if the image from the first lens is real.) Therefore, for the second lens,

$$\frac{1}{p_2} + \frac{1}{q_2} = \frac{1}{f_2} \rightarrow -\frac{1}{q_1} + \frac{1}{q} = \frac{1}{f_2}$$

where $q = q_2$ is the final image distance from the second lens, which is the image distance for the combination. Adding the equations for the two lenses eliminates q_1 and gives

$$\frac{1}{p} + \frac{1}{q} = \frac{1}{f_1} + \frac{1}{f_2}$$

If the combination is replaced with a single lens that forms an image at the same location, its focal length must be related to the individual focal lengths by the expression

$$\frac{1}{f} = \frac{1}{f_1} + \frac{1}{f_2} \quad (36.19)$$

Therefore, two thin lenses in contact with each other are equivalent to a single thin lens having a focal length given by Equation 36.19.

◀ Focal length for a combination of two thin lenses in contact

Example 36.10 Where Is the Final Image?

Two thin converging lenses of focal lengths $f_1 = 10.0$ cm and $f_2 = 20.0$ cm are separated by 20.0 cm as illustrated in Figure 36.30. An object is placed 30.0 cm to the left of lens 1. Find the position and the magnification of the final image.

SOLUTION

Conceptualize Imagine light rays passing through the first lens and forming a real image (because $p > f$) in the absence of a second lens. Figure 36.30 shows these light rays forming the inverted image I_1 . Once the light rays converge to the image point, they do not stop. They continue through the image point and interact with the

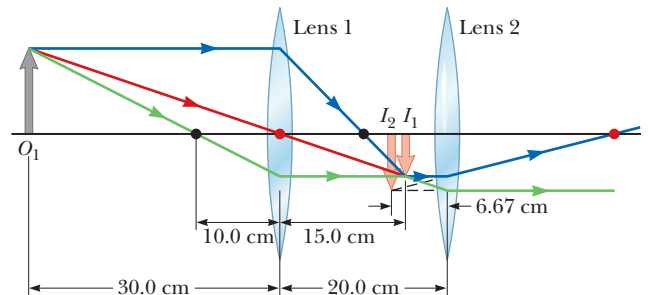


Figure 36.30 (Example 36.10) A combination of two converging lenses. The ray diagram shows the location of the final image (I_2) due to the combination of lenses. The black dots are the focal points of lens 1, and the red dots are the focal points of lens 2.

continued

▶ 36.10 continued

second lens. The rays leaving the image point behave in the same way as the rays leaving an object. Therefore, the image of the first lens serves as the object of the second lens.

Categorize We categorize this problem as one in which the thin lens equation is applied in a stepwise fashion to the two lenses.

Analyze Find the location of the image formed by lens 1 from the thin lens equation:

$$\frac{1}{q_1} = \frac{1}{f} - \frac{1}{p_1}$$

$$\frac{1}{q_1} = \frac{1}{10.0 \text{ cm}} - \frac{1}{30.0 \text{ cm}}$$

$$q_1 = +15.0 \text{ cm}$$

Find the magnification of the image from Equation 36.17:

$$M_1 = -\frac{q_1}{p_1} = -\frac{15.0 \text{ cm}}{30.0 \text{ cm}} = -0.500$$

The image formed by this lens acts as the object for the second lens. Therefore, the object distance for the second lens is $20.0 \text{ cm} - 15.0 \text{ cm} = 5.00 \text{ cm}$.

Find the location of the image formed by lens 2 from the thin lens equation:

$$\frac{1}{q_2} = \frac{1}{20.0 \text{ cm}} - \frac{1}{5.00 \text{ cm}}$$

$$q_2 = -6.67 \text{ cm}$$

Find the magnification of the image from Equation 36.17:

$$M_2 = -\frac{q_2}{p_2} = -\frac{(-6.67 \text{ cm})}{5.00 \text{ cm}} = +1.33$$

Find the overall magnification of the system from Equation 36.18:

$$M = M_1 M_2 = (-0.500)(1.33) = -0.667$$

Finalize The negative sign on the overall magnification indicates that the final image is inverted with respect to the initial object. Because the absolute value of the magnification is less than 1, the final image is smaller than the object.

Because q_2 is negative, the final image is on the front, or left, side of lens 2. These conclusions are consistent with the ray diagram in Figure 36.30.

WHAT IF? Suppose you want to create an upright image with this system of two lenses. How must the second lens be moved?

Answer Because the object is farther from the first lens than the focal length of that lens, the first image is inverted. Consequently, the second lens must invert the image once again so that the final image is upright. An

inverted image is only formed by a converging lens if the object is outside the focal point. Therefore, the image formed by the first lens must be to the left of the focal point of the second lens in Figure 36.30. To make that happen, you must move the second lens at least as far away from the first lens as the sum $q_1 + f_2 = 15.0 \text{ cm} + 20.0 \text{ cm} = 35.0 \text{ cm}$.

36.5 Lens Aberrations

Our analysis of mirrors and lenses assumes rays make small angles with the principal axis and the lenses are thin. In this simple model, all rays leaving a point source focus at a single point, producing a sharp image. Clearly, that is not always true. When the approximations used in this analysis do not hold, imperfect images are formed.

A precise analysis of image formation requires tracing each ray, using Snell's law at each refracting surface and the law of reflection at each reflecting surface. This procedure shows that the rays from a point object do not focus at a single point, with the result that the image is blurred. The departures of actual images from the ideal predicted by our simplified model are called **aberrations**.

Spherical Aberration

Spherical aberration occurs because the focal points of rays far from the principal axis of a spherical lens (or mirror) are different from the focal points of rays of the same wavelength passing near the axis. Figure 36.31 illustrates spherical aberration for parallel rays passing through a converging lens. Rays passing through points near the center of the lens are imaged farther from the lens than rays passing through points near the edges. Figure 36.8 earlier in the chapter shows spherical aberration for light rays leaving a point object and striking a spherical mirror.

Many cameras have an adjustable aperture to control light intensity and reduce spherical aberration. (An aperture is an opening that controls the amount of light passing through the lens.) Sharper images are produced as the aperture size is reduced; with a small aperture, only the central portion of the lens is exposed to the light and therefore a greater percentage of the rays are paraxial. At the same time, however, less light passes through the lens. To compensate for this lower light intensity, a longer exposure time is used.

In the case of mirrors, spherical aberration can be minimized through the use of a parabolic reflecting surface rather than a spherical surface. Parabolic surfaces are not used often, however, because those with high-quality optics are very expensive to make. Parallel light rays incident on a parabolic surface focus at a common point, regardless of their distance from the principal axis. Parabolic reflecting surfaces are used in many astronomical telescopes to enhance image quality.

Chromatic Aberration

In Chapter 35, we described dispersion, whereby a material's index of refraction varies with wavelength. Because of this phenomenon, violet rays are refracted more than red rays when white light passes through a lens (Fig. 36.32). The figure shows that the focal length of a lens is greater for red light than for violet light. Other wavelengths (not shown in Fig. 36.32) have focal points intermediate between those of red and violet, which causes a blurred image and is called **chromatic aberration**.

Chromatic aberration for a diverging lens also results in a shorter focal length for violet light than for red light, but on the front side of the lens. Chromatic aberration can be greatly reduced by combining a converging lens made of one type of glass and a diverging lens made of another type of glass.

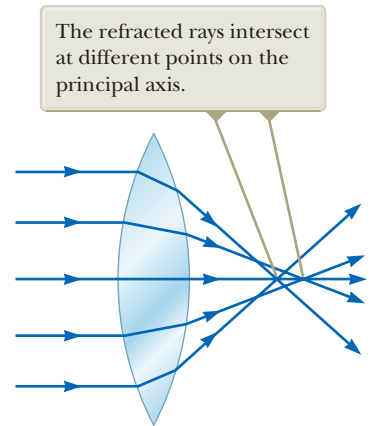


Figure 36.31 Spherical aberration caused by a converging lens. Does a diverging lens cause spherical aberration?

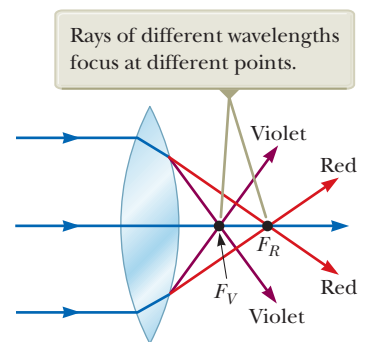


Figure 36.32 Chromatic aberration caused by a converging lens.

36.6 The Camera

The photographic **camera** is a simple optical instrument whose essential features are shown in Figure 36.33. It consists of a light-tight chamber, a converging lens that produces a real image, and a light-sensitive component behind the lens on which the image is formed.

The image in a digital camera is formed on a *charge-coupled device* (CCD), which digitizes the image, turning it into binary code. (A CCD is described in Section 40.2.) The digital information is then stored on a memory chip for playback on the camera's display screen, or it can be downloaded to a computer. Film cameras are similar to digital cameras except that the light forms an image on light-sensitive film rather than on a CCD. The film must then be chemically processed to produce the image on paper. In the discussion that follows, we assume the camera is digital.

A camera is focused by varying the distance between the lens and the CCD. For proper focusing—which is necessary for the formation of sharp images—the lens-to-CCD distance depends on the object distance as well as the focal length of the lens.

The shutter, positioned behind the lens, is a mechanical device that is opened for selected time intervals, called *exposure times*. You can photograph moving objects by using short exposure times or photograph dark scenes (with low light levels) by using long exposure times. If this adjustment were not available, it would be impossible

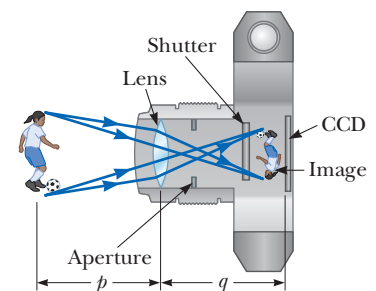


Figure 36.33 Cross-sectional view of a simple digital camera. The CCD is the light-sensitive component of the camera. In a nondigital camera, the light from the lens falls onto photographic film. In reality, $p \gg q$.

to take stop-action photographs. For example, a rapidly moving vehicle could move enough in the time interval during which the shutter is open to produce a blurred image. Another major cause of blurred images is the movement of the camera while the shutter is open. To prevent such movement, either short exposure times or a tripod should be used, even for stationary objects. Typical shutter speeds (that is, exposure times) are $\frac{1}{30}$ s, $\frac{1}{60}$ s, $\frac{1}{125}$ s, and $\frac{1}{250}$ s. In practice, stationary objects are normally shot with an intermediate shutter speed of $\frac{1}{60}$ s.

The intensity I of the light reaching the CCD is proportional to the area of the lens. Because this area is proportional to the square of the diameter D , it follows that I is also proportional to D^2 . Light intensity is a measure of the rate at which energy is received by the CCD per unit area of the image. Because the area of the image is proportional to q^2 and $q \approx f$ (when $p \gg f$, so p can be approximated as infinite), we conclude that the intensity is also proportional to $1/f^2$ and therefore that $I \propto D^2/f^2$.

The ratio f/D is called the **f -number** of a lens:

$$f\text{-number} \equiv \frac{f}{D} \quad (36.20)$$

Hence, the intensity of light incident on the CCD varies according to the following proportionality:

$$I \propto \frac{1}{(f/D)^2} \propto \frac{1}{(f\text{-number})^2} \quad (36.21)$$

The f -number is often given as a description of the lens's "speed." The lower the f -number, the wider the aperture and the higher the rate at which energy from the light exposes the CCD; therefore, a lens with a low f -number is a "fast" lens. The conventional notation for an f -number is " f /" followed by the actual number. For example, " $f/4$ " means an f -number of 4; it *does not* mean to divide f by 4! Extremely fast lenses, which have f -numbers as low as approximately $f/1.2$, are expensive because it is very difficult to keep aberrations acceptably small with light rays passing through a large area of the lens. Camera lens systems (that is, combinations of lenses with adjustable apertures) are often marked with multiple f -numbers, usually $f/2.8$, $f/4$, $f/5.6$, $f/8$, $f/11$, and $f/16$. Any one of these settings can be selected by adjusting the aperture, which changes the value of D . Increasing the setting from one f -number to the next higher value (for example, from $f/2.8$ to $f/4$) decreases the area of the aperture by a factor of 2. The lowest f -number setting on a camera lens corresponds to a wide-open aperture and the use of the maximum possible lens area.

Simple cameras usually have a fixed focal length and a fixed aperture size, with an f -number of about $f/11$. This high value for the f -number allows for a large **depth of field**, meaning that objects at a wide range of distances from the lens form reasonably sharp images on the CCD. In other words, the camera does not have to be focused.

- Quick Quiz 36.7** A camera can be modeled as a simple converging lens that focuses an image on the CCD, acting as the screen. A camera is initially focused on a distant object. To focus the image of an object close to the camera, must the lens be
- (a) moved away from the CCD, (b) left where it is, or (c) moved toward the CCD?

Example 36.11 Finding the Correct Exposure Time

The lens of a digital camera has a focal length of 55 mm and a speed (an f -number) of $f/1.8$. The correct exposure time for this speed under certain conditions is known to be $\frac{1}{500}$ s.

(A) Determine the diameter of the lens.

SOLUTION

Conceptualize Remember that the f -number for a lens relates its focal length to its diameter.

▶ 36.11 continued

Categorize We determine results using equations developed in this section, so we categorize this example as a substitution problem.

Solve Equation 36.20 for D and substitute numerical values:

$$D = \frac{f}{f\text{-number}} = \frac{55 \text{ mm}}{1.8} = 31 \text{ mm}$$

(B) Calculate the correct exposure time if the f -number is changed to $f/4$ under the same lighting conditions.

SOLUTION

The total light energy hitting the CCD is proportional to the product of the intensity and the exposure time. If I is the light intensity reaching the CCD, the energy per unit area received by the CCD in a time interval Δt is proportional to $I \Delta t$. Comparing the two situations, we require that $I_1 \Delta t_1 = I_2 \Delta t_2$, where Δt_1 is the correct exposure time for $f/1.8$ and Δt_2 is the correct exposure time for $f/4$.

Use this result and substitute for I from Equation 36.21:

$$I_1 \Delta t_1 = I_2 \Delta t_2 \rightarrow \frac{\Delta t_1}{(f_1\text{-number})^2} = \frac{\Delta t_2}{(f_2\text{-number})^2}$$

Solve for Δt_2 and substitute numerical values:

$$\Delta t_2 = \left(\frac{f_2\text{-number}}{f_1\text{-number}} \right)^2 \Delta t_1 = \left(\frac{4}{1.8} \right)^2 \left(\frac{1}{500} \text{ s} \right) \approx \frac{1}{100} \text{ s}$$

As the aperture size is reduced, the exposure time must increase.

36.7 The Eye

Like a camera, a normal eye focuses light and produces a sharp image. The mechanisms by which the eye controls the amount of light admitted and adjusts to produce correctly focused images, however, are far more complex, intricate, and effective than those in even the most sophisticated camera. In all respects, the eye is a physiological wonder.

Figure 36.34 shows the basic parts of the human eye. Light entering the eye passes through a transparent structure called the *cornea* (Fig. 36.35), behind which are a clear liquid (the *aqueous humor*), a variable aperture (the *pupil*, which is an opening in the *iris*), and the *crystalline lens*. Most of the refraction occurs at the outer surface of the eye, where the cornea is covered with a film of tears. Relatively little refraction occurs in the crystalline lens because the aqueous humor in contact with the lens has an average index of refraction close to that of the lens. The iris, which is the colored portion of the eye, is a muscular diaphragm that controls pupil size. The iris regulates the amount of light entering the eye by dilating, or

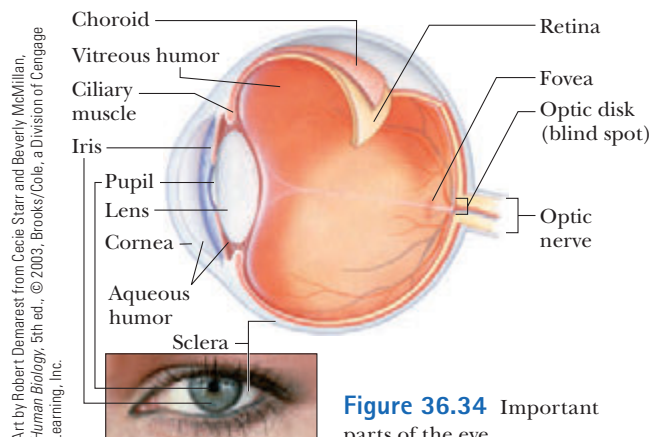


Figure 36.34 Important parts of the eye.

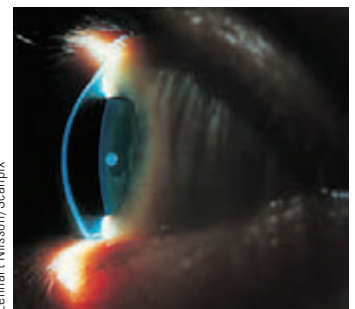


Figure 36.35 Close-up photograph of the cornea of the human eye.

opening, the pupil in low-light conditions and contracting, or closing, the pupil in high-light conditions. The f -number range of the human eye is approximately $f/2.8$ to $f/16$.

The cornea–lens system focuses light onto the back surface of the eye, the *retina*, which consists of millions of sensitive receptors called *rods* and *cones*. When stimulated by light, these receptors send impulses via the optic nerve to the brain, where an image is perceived. By this process, a distinct image of an object is observed when the image falls on the retina.

The eye focuses on an object by varying the shape of the pliable crystalline lens through a process called **accommodation**. The lens adjustments take place so swiftly that we are not even aware of the change. Accommodation is limited in that objects very close to the eye produce blurred images. The **near point** is the closest distance for which the lens can accommodate to focus light on the retina. This distance usually increases with age and has an average value of 25 cm. At age 10, the near point of the eye is typically approximately 18 cm. It increases to approximately 25 cm at age 20, to 50 cm at age 40, and to 500 cm or greater at age 60. The **far point** of the eye represents the greatest distance for which the lens of the relaxed eye can focus light on the retina. A person with normal vision can see very distant objects and therefore has a far point that can be approximated as infinity.

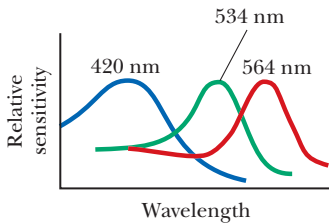


Figure 36.36 Approximate color sensitivity of the three types of cones in the retina.

The retina is covered with two types of light-sensitive cells, called **rods** and **cones**. The rods are not sensitive to color but are more light sensitive than the cones. The rods are responsible for *scotopic vision*, or dark-adapted vision. Rods are spread throughout the retina and allow good peripheral vision for all light levels and motion detection in the dark. The cones are concentrated in the fovea. These cells are sensitive to different wavelengths of light. The three categories of these cells are called red, green, and blue cones because of the peaks of the color ranges to which they respond (Fig. 36.36). If the red and green cones are stimulated simultaneously (as would be the case if yellow light were shining on them), the brain interprets what is seen as yellow. If all three types of cones are stimulated by the separate colors red, blue, and green, white light is seen. If all three types of cones are stimulated by light that contains *all* colors, such as sunlight, again white light is seen.

Televisions and computer monitors take advantage of this visual illusion by having only red, green, and blue dots on the screen. With specific combinations of brightness in these three primary colors, our eyes can be made to see any color in the rainbow. Therefore, the yellow lemon you see in a television commercial is not actually yellow, it is red and green! The paper on which this page is printed is made of tiny, matted, translucent fibers that scatter light in all directions, and the resultant mixture of colors appears white to the eye. Snow, clouds, and white hair are not actually white. In fact, there is no such thing as a white pigment. The appearance of these things is a consequence of the scattering of light containing all colors, which we interpret as white.

Conditions of the Eye

When the eye suffers a mismatch between the focusing range of the lens–cornea system and the length of the eye, with the result that light rays from a near object reach the retina before they converge to form an image as shown in Figure 36.37a, the condition is known as **farsightedness** (or *hyperopia*). A farsighted person can usually see faraway objects clearly but not nearby objects. Although the near point of a normal eye is approximately 25 cm, the near point of a farsighted person is much farther away. The refracting power in the cornea and lens is insufficient to focus the light from all but distant objects satisfactorily. The condition can be corrected by placing a converging lens in front of the eye as shown in Figure 36.37b. The lens refracts the incoming rays more toward the principal axis before entering the eye, allowing them to converge and focus on the retina.

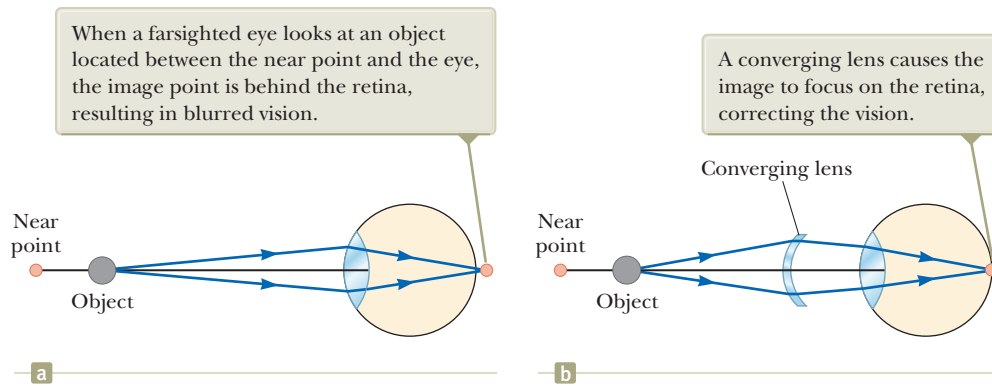


Figure 36.37 (a) An uncorrected farsighted eye. (b) A farsighted eye corrected with a converging lens.

A person with **nearsightedness** (or *myopia*), another mismatch condition, can focus on nearby objects but not on faraway objects. The far point of the nearsighted eye is not infinity and may be less than 1 m. The maximum focal length of the nearsighted eye is insufficient to produce a sharp image on the retina, and rays from a distant object converge to a focus in front of the retina. They then continue past that point, diverging before they finally reach the retina and causing blurred vision (Fig. 36.38a). Nearsightedness can be corrected with a diverging lens as shown in Figure 36.38b. The lens refracts the rays away from the principal axis before they enter the eye, allowing them to focus on the retina.

Beginning in middle age, most people lose some of their accommodation ability as their visual muscles weaken and the lens hardens. Unlike farsightedness, which is a mismatch between focusing power and eye length, **presbyopia** (literally, “old-age vision”) is due to a reduction in accommodation ability. The cornea and lens do not have sufficient focusing power to bring nearby objects into focus on the retina. The symptoms are the same as those of farsightedness, and the condition can be corrected with converging lenses.

In eyes having a defect known as **astigmatism**, light from a point source produces a line image on the retina. This condition arises when the cornea, the lens, or both are not perfectly symmetric. Astigmatism can be corrected with lenses that have different curvatures in two mutually perpendicular directions.

Optometrists and ophthalmologists usually prescribe lenses¹ measured in **diopters**: the **power** P of a lens in diopters equals the inverse of the focal length in meters: $P = 1/f$. For example, a converging lens of focal length +20 cm has a power of +5.0 diopters, and a diverging lens of focal length -40 cm has a power of -2.5 diopters.

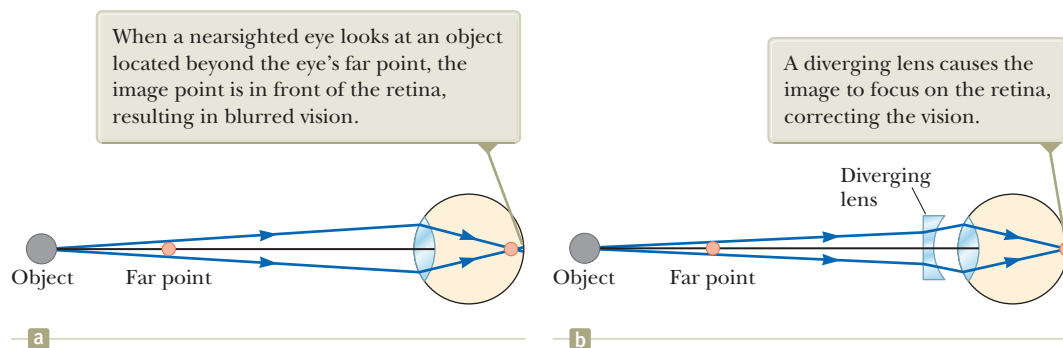


Figure 36.38 (a) An uncorrected nearsighted eye. (b) A nearsighted eye corrected with a diverging lens.

¹The word *lens* comes from *lenticil*, the name of an Italian legume. (You may have eaten lentil soup.) Early eyeglasses were called “glass lentils” because the biconvex shape of their lenses resembled the shape of a lentil. The first lenses for farsightedness and presbyopia appeared around 1280; concave eyeglasses for correcting nearsightedness did not appear until more than 100 years later.

- Quick Quiz 36.8** Two campers wish to start a fire during the day. One camper is nearsighted, and one is farsighted. Whose glasses should be used to focus the Sun's rays onto some paper to start the fire? (a) either camper (b) the nearsighted camper (c) the farsighted camper

36.8 The Simple Magnifier

The simple magnifier, or magnifying glass, consists of a single converging lens. This device increases the apparent size of an object.

Suppose an object is viewed at some distance p from the eye as illustrated in Figure 36.39. The size of the image formed at the retina depends on the angle θ subtended by the object at the eye. As the object moves closer to the eye, θ increases and a larger image is observed. An average normal human eye, however, cannot focus on an object closer than about 25 cm, the near point (Fig. 36.40a). Therefore, θ is maximum at the near point.

To further increase the apparent angular size of an object, a converging lens can be placed in front of the eye as in Figure 36.40b, with the object located at point O , immediately inside the focal point of the lens. At this location, the lens forms a virtual, upright, enlarged image. We define **angular magnification** m as the ratio of the angle subtended by an object with a lens in use (angle θ in Fig. 36.40b) to the angle subtended by the object placed at the near point with no lens in use (angle θ_0 in Fig. 36.40a):

$$m \equiv \frac{\theta}{\theta_0} \quad (36.22)$$

The angular magnification is a maximum when the image is at the near point of the eye, that is, when $q = -25$ cm. The object distance corresponding to this image distance can be calculated from the thin lens equation:

$$\frac{1}{p} + \frac{1}{-25 \text{ cm}} = \frac{1}{f} \rightarrow p = \frac{25f}{25 + f}$$

where f is the focal length of the magnifier in centimeters. If we make the small-angle approximations

$$\tan \theta_0 \approx \theta_0 \approx \frac{h}{25} \quad \text{and} \quad \tan \theta \approx \theta \approx \frac{h'}{p} \quad (36.23)$$

Equation 36.22 becomes

$$m_{\max} = \frac{\theta}{\theta_0} = \frac{h'/p}{h/25} = \frac{25}{p} = \frac{25}{25f/(25 + f)}$$

$$m_{\max} = 1 + \frac{25 \text{ cm}}{f} \quad (36.24)$$

Although the eye can focus on an image formed anywhere between the near point and infinity, it is most relaxed when the image is at infinity. For the image formed by the magnifying lens to appear at infinity, the object has to be at the focal point of the lens. In this case, Equations 36.23 become

$$\theta_0 \approx \frac{h}{25} \quad \text{and} \quad \theta \approx \frac{h}{f}$$

and the magnification is

$$m_{\min} = \frac{\theta}{\theta_0} = \frac{25 \text{ cm}}{f} \quad (36.25)$$

With a single lens, it is possible to obtain angular magnifications up to about 4 without serious aberrations. Magnifications up to about 20 can be achieved by using one or two additional lenses to correct for aberrations.

The size of the image formed on the retina depends on the angle θ subtended at the eye.

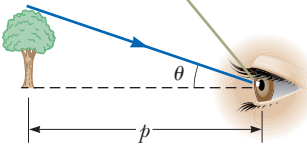


Figure 36.39 An observer looks at an object at distance p .

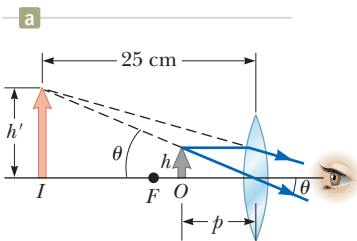
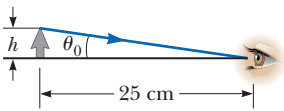


Figure 36.40 (a) An object placed at the near point of the eye ($p = 25$ cm) subtends an angle $\theta_0 \approx h/25$ cm at the eye. (b) An object placed near the focal point of a converging lens produces a magnified image that subtends an angle $\theta \approx h'/25$ cm at the eye.



A simple magnifier, also called a magnifying glass, is used to view an enlarged image of a portion of a map.

Example 36.12 Magnification of a Lens

What is the maximum magnification that is possible with a lens having a focal length of 10 cm, and what is the magnification of this lens when the eye is relaxed?

SOLUTION

Conceptualize Study Figure 36.40b for the situation in which a magnifying glass forms an enlarged image of an object placed inside the focal point. The maximum magnification occurs when the image is located at the near point of the eye. When the eye is relaxed, the image is at infinity.

Categorize We determine results using equations developed in this section, so we categorize this example as a substitution problem.

Evaluate the maximum magnification from Equation 36.24:

$$m_{\max} = 1 + \frac{25 \text{ cm}}{f} = 1 + \frac{25 \text{ cm}}{10 \text{ cm}} = 3.5$$

Evaluate the minimum magnification, when the eye is relaxed, from Equation 36.25:

$$m_{\min} = \frac{25 \text{ cm}}{f} = \frac{25 \text{ cm}}{10 \text{ cm}} = 2.5$$

36.9 The Compound Microscope

A simple magnifier provides only limited assistance in inspecting minute details of an object. Greater magnification can be achieved by combining two lenses in a device called a **compound microscope** shown in Figure 36.41a. It consists of one lens, the **objective**, that has a very short focal length $f_o < 1$ cm and a second lens, the **eyepiece**, that has a focal length f_e of a few centimeters. The two lenses are separated by a distance L that is much greater than either f_o or f_e . The object, which is placed just outside the focal point of the objective, forms a real, inverted image at I_1 , and this image is located at or close to the focal point of the eyepiece. The eyepiece, which serves as a simple magnifier, produces at I_2 a virtual, enlarged image of I_1 . The lateral magnification M_1 of the first image is $-q_1/p_1$. Notice from Figure 36.41a that q_1 is approximately equal to L and that the object is very close

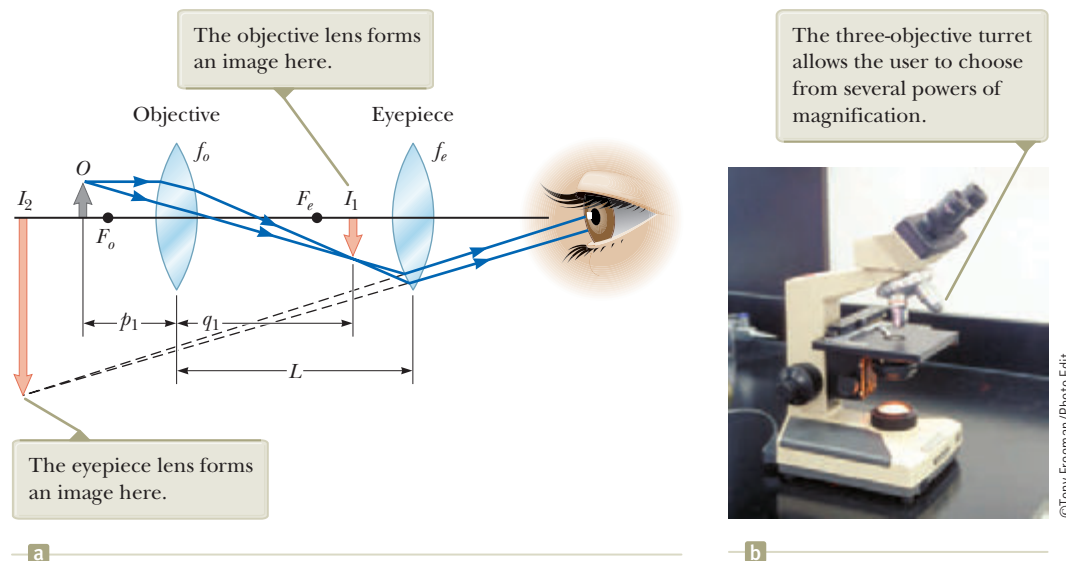


Figure 36.41 (a) Diagram of a compound microscope, which consists of an objective lens and an eyepiece lens. (b) A compound microscope.

to the focal point of the objective: $p_1 \approx f_o$. Therefore, the lateral magnification by the objective is

$$M_o \approx -\frac{L}{f_o}$$

The angular magnification by the eyepiece for an object (corresponding to the image at I_1) placed at the focal point of the eyepiece is, from Equation 36.25,

$$m_e = \frac{25 \text{ cm}}{f_e}$$

The overall magnification of the image formed by a compound microscope is defined as the product of the lateral and angular magnifications:

$$M = M_o m_e = -\frac{L}{f_o} \left(\frac{25 \text{ cm}}{f_e} \right) \quad (36.26)$$

The negative sign indicates that the image is inverted.

The microscope has extended human vision to the point where we can view previously unknown details of incredibly small objects. The capabilities of this instrument have steadily increased with improved techniques for precision grinding of lenses. A question often asked about microscopes is, “If one were extremely patient and careful, would it be possible to construct a microscope that would enable the human eye to see an atom?” The answer is no, as long as light is used to illuminate the object. For an object under an optical microscope (one that uses visible light) to be seen, the object must be at least as large as a wavelength of light. Because the diameter of any atom is many times smaller than the wavelengths of visible light, the mysteries of the atom must be probed using other types of “microscopes.”

36.10 The Telescope

Two fundamentally different types of **telescopes** exist; both are designed to aid in viewing distant objects such as the planets in our solar system. The first type, the **refracting telescope**, uses a combination of lenses to form an image.

Like the compound microscope, the refracting telescope shown in Figure 36.42a has an objective and an eyepiece. The two lenses are arranged so that the objective

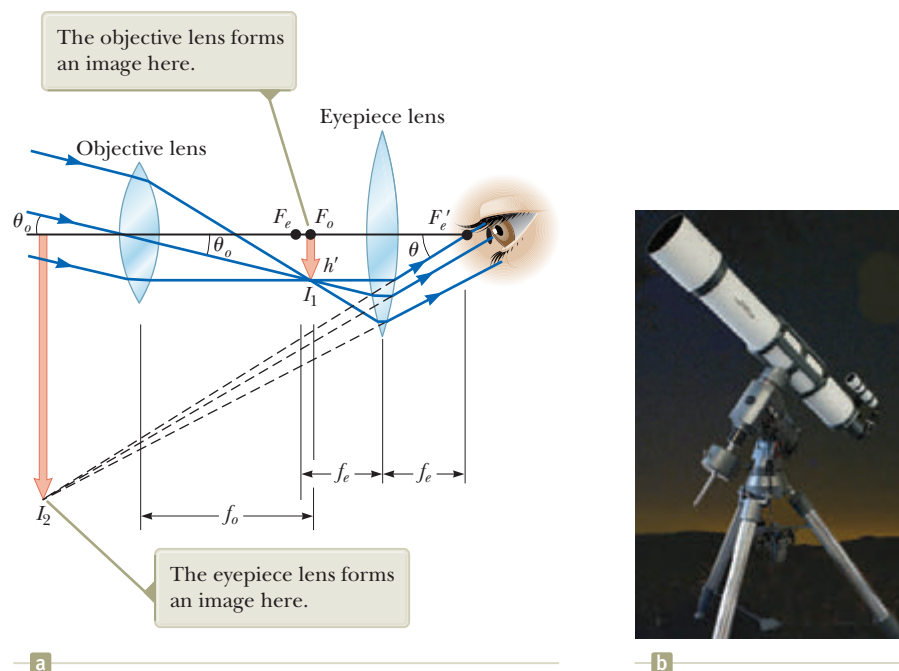


Figure 36.42 (a) Lens arrangement in a refracting telescope, with the object at infinity. (b) A refracting telescope.

forms a real, inverted image of a distant object very near the focal point of the eyepiece. Because the object is essentially at infinity, this point at which I_1 forms is the focal point of the objective. The eyepiece then forms, at I_2 , an enlarged, inverted image of the image at I_1 . To provide the largest possible magnification, the image distance for the eyepiece is infinite. Therefore, the image due to the objective lens, which acts as the object for the eyepiece lens, must be located at the focal point of the eyepiece. Hence, the two lenses are separated by a distance $f_o + f_e$, which corresponds to the length of the telescope tube.

The angular magnification of the telescope is given by θ/θ_o , where θ_o is the angle subtended by the object at the objective and θ is the angle subtended by the final image at the viewer's eye. Consider Figure 36.42a, in which the object is a very great distance to the left of the figure. The angle θ_o (to the *left* of the objective) subtended by the object at the objective is the same as the angle (to the *right* of the objective) subtended by the first image at the objective. Therefore,

$$\tan \theta_o \approx \theta_o \approx -\frac{h'}{f_o}$$

where the negative sign indicates that the image is inverted.

The angle θ subtended by the final image at the eye is the same as the angle that a ray coming from the tip of I_1 and traveling parallel to the principal axis makes with the principal axis after it passes through the lens. Therefore,

$$\tan \theta \approx \theta \approx \frac{h'}{f_e}$$

We have not used a negative sign in this equation because the final image is not inverted; the object creating this final image I_2 is I_1 , and both it and I_2 point in the same direction. Therefore, the angular magnification of the telescope can be expressed as

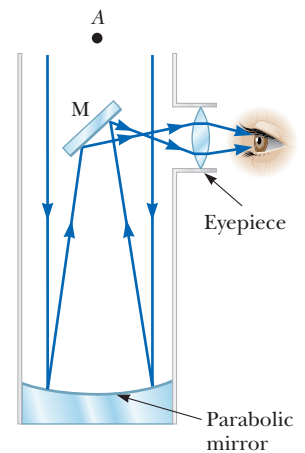
$$m = \frac{\theta}{\theta_o} = \frac{h'/f_e}{-h'/f_o} = -\frac{f_o}{f_e} \quad (36.27)$$

This result shows that the angular magnification of a telescope equals the ratio of the objective focal length to the eyepiece focal length. The negative sign indicates that the image is inverted.

When you look through a telescope at such relatively nearby objects as the Moon and the planets, magnification is important. Individual stars in our galaxy, however, are so far away that they always appear as small points of light no matter how great the magnification. To gather as much light as possible, large research telescopes used to study very distant objects must have a large diameter. It is difficult and expensive to manufacture large lenses for refracting telescopes. Another difficulty with large lenses is that their weight leads to sagging, which is an additional source of aberration.

These problems associated with large lenses can be partially overcome by replacing the objective with a concave mirror, which results in the second type of telescope, the **reflecting telescope**. Because light is reflected from the mirror and does not pass through a lens, the mirror can have rigid supports on the back side. Such supports eliminate the problem of sagging.

Figure 36.43a shows the design for a typical reflecting telescope. The incoming light rays are reflected by a parabolic mirror at the base. These reflected rays converge toward point A in the figure, where an image would be formed. Before this image is formed, however, a small, flat mirror M reflects the light toward an opening in the tube's side and it passes into an eyepiece. This particular design is said to have a Newtonian focus because Newton developed it. Figure 36.43b shows such a telescope. Notice that the light never passes through glass (except through the small eyepiece) in the reflecting telescope. As a result, problems associated with chromatic aberration are virtually eliminated. The reflecting telescope can be made even shorter by orienting the flat mirror so that it reflects the light back



a



b

Figure 36.43 (a) A Newtonian-focus reflecting telescope. (b) A reflecting telescope. This type of telescope is shorter than that in Figure 36.42b.

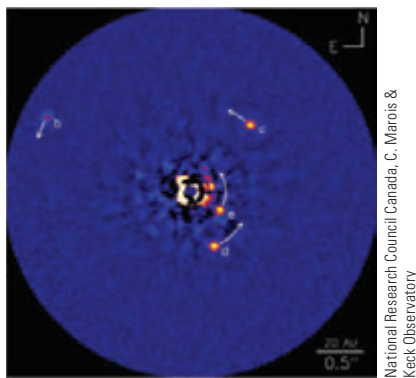


Figure 36.44 A direct optical image of a solar system around the star HR8799, developed at the Keck Observatory in Hawaii.

toward the objective mirror and the light enters an eyepiece in a hole in the middle of the mirror.

The largest reflecting telescopes in the world are at the Keck Observatory on Mauna Kea, Hawaii. The site includes two telescopes with diameters of 10 m, each containing 36 hexagonally shaped, computer-controlled mirrors that work together to form a large reflecting surface. In addition, the two telescopes can work together to provide a telescope with an effective diameter of 85 m. In contrast, the largest refracting telescope in the world, at the Yerkes Observatory in Williams Bay, Wisconsin, has a diameter of only 1 m.

Figure 36.44 shows a remarkable optical image from the Keck Observatory of a solar system around the star HR8799, located 129 light-years from the Earth. The planets labeled b, c, and d were seen in 2008 and the innermost planet, labeled e, was observed in December 2010. This photograph represents the first direct image of another solar system and was made possible by the adaptive optics technology used in the Keck Observatory.

Summary

Definitions

The **lateral magnification** M of the image due to a mirror or lens is defined as the ratio of the image height h' to the object height h . It is equal to the negative of the ratio of the image distance q to the object distance p :

$$M \equiv \frac{\text{image height}}{\text{object height}} = \frac{h'}{h} = -\frac{q}{p} \quad (36.1, 36.2, 36.17)$$

The **angular magnification** m is the ratio of the angle subtended by an object with a lens in use (angle θ in Fig. 36.40b) to the angle subtended by the object placed at the near point with no lens in use (angle θ_0 in Fig. 36.40a):

$$m \equiv \frac{\theta}{\theta_0} \quad (36.22)$$

The ratio of the focal length of a camera lens to the diameter of the lens is called the **f -number** of the lens:

$$f\text{-number} \equiv \frac{f}{D} \quad (36.20)$$

Concepts and Principles

In the paraxial ray approximation, the object distance p and image distance q for a spherical mirror of radius R are related by the **mirror equation**:

$$\frac{1}{p} + \frac{1}{q} = \frac{2}{R} = \frac{1}{f} \quad (36.4, 36.6)$$

where $f = R/2$ is the **focal length** of the mirror.

An image can be formed by refraction from a spherical surface of radius R . The object and image distances for refraction from such a surface are related by

$$\frac{n_1}{p} + \frac{n_2}{q} = \frac{n_2 - n_1}{R} \quad (36.8)$$

where the light is incident in the medium for which the index of refraction is n_1 and is refracted in the medium for which the index of refraction is n_2 .

The inverse of the **focal length** f of a thin lens surrounded by air is given by the **lens-makers' equation**:

$$\frac{1}{f} = (n - 1) \left(\frac{1}{R_1} - \frac{1}{R_2} \right) \quad (36.15)$$

Converging lenses have positive focal lengths, and **diverging lenses** have negative focal lengths.

For a thin lens, and in the paraxial ray approximation, the object and image distances are related by the **thin lens equation**:

$$\frac{1}{p} + \frac{1}{q} = \frac{1}{f} \quad (36.16)$$

The maximum magnification of a single lens of focal length f used as a simple magnifier is

$$m_{\max} = 1 + \frac{25 \text{ cm}}{f} \quad (36.24)$$

The overall magnification of the image formed by a compound microscope is

$$M = -\frac{L}{f_o} \left(\frac{25 \text{ cm}}{f_e} \right) \quad (36.26)$$

where f_o and f_e are the focal lengths of the objective and eyepiece lenses, respectively, and L is the distance between the lenses.

The angular magnification of a refracting telescope can be expressed as

$$m = -\frac{f_o}{f_e} \quad (36.27)$$

where f_o and f_e are the focal lengths of the objective and eyepiece lenses, respectively. The angular magnification of a reflecting telescope is given by the same expression where f_o is the focal length of the objective mirror.

Objective Questions

1. denotes answer available in *Student Solutions Manual/Study Guide*

- The faceplate of a diving mask can be ground into a corrective lens for a diver who does not have perfect vision. The proper design allows the person to see clearly both under water and in the air. Normal eyeglasses have lenses with both the front and back surfaces curved. Should the lenses of a diving mask be curved (a) on the outer surface only, (b) on the inner surface only, or (c) on both surfaces?
- Lulu looks at her image in a makeup mirror. It is enlarged when she is close to the mirror. As she backs away, the image becomes larger, then impossible to identify when she is 30.0 cm from the mirror, then upside down when she is beyond 30.0 cm, and finally small, clear, and upside down when she is much farther from the mirror. (i) Is the mirror (a) convex, (b) plane, or (c) concave? (ii) Is the magnitude of its focal length (a) 0, (b) 15.0 cm, (c) 30.0 cm, (d) 60.0 cm, or (e) ∞ ?
- An object is located 50.0 cm from a converging lens having a focal length of 15.0 cm. Which of the following statements is true regarding the image formed by the lens? (a) It is virtual, upright, and larger than the object. (b) It is real, inverted, and smaller than the object. (c) It is virtual, inverted, and smaller than the object. (d) It is real, inverted, and larger than the object. (e) It is real, upright, and larger than the object.
- (i) When an image of an object is formed by a converging lens, which of the following statements is *always* true? More than one statement may be correct. (a) The image is virtual. (b) The image is real. (c) The image is upright. (d) The image is inverted. (e) None of those statements is always true. (ii) When the image of an object is formed by a diverging lens, which of the statements is *always* true?
- A converging lens in a vertical plane receives light from an object and forms an inverted image on a screen. An opaque card is then placed next to the lens, covering only the upper half of the lens. What happens to the image on the screen? (a) The upper half of the image disappears. (b) The lower half of the image disappears. (c) The entire image disappears. (d) The entire image is still visible, but is dimmer. (e) No change in the image occurs.
- If Josh's face is 30.0 cm in front of a concave shaving mirror creating an upright image 1.50 times as large as the object, what is the mirror's focal length? (a) 12.0 cm (b) 20.0 cm (c) 70.0 cm (d) 90.0 cm (e) none of those answers
- Two thin lenses of focal lengths $f_1 = 15.0$ and $f_2 = 10.0$ cm, respectively, are separated by 35.0 cm along a common axis. The f_1 lens is located to the left of the f_2 lens. An object is now placed 50.0 cm to the left of the f_1 lens, and a final image due to light passing through both lenses forms. By what factor is the final image different in size from the object? (a) 0.600 (b) 1.20 (c) 2.40 (d) 3.60 (e) none of those answers
- If you increase the aperture diameter of a camera by a factor of 3, how is the intensity of the light striking the film affected? (a) It increases by factor of 3. (b) It decreases by a factor of 3. (c) It increases by a factor of 9. (d) It decreases by a factor of 9. (e) Increasing the aperture size doesn't affect the intensity.
- A person spearfishing from a boat sees a stationary fish a few meters away in a direction about 30° below the horizontal. To spear the fish, and assuming the spear does not change direction when it enters the water, should the person (a) aim above where he sees the fish, (b) aim below the fish, or (c) aim precisely at the fish?
- Model each of the following devices in use as consisting of a single converging lens. Rank the cases according to the ratio of the distance from the object to the lens to the focal length of the lens, from the largest ratio to the smallest. (a) a film-based movie projector showing a movie (b) a magnifying glass being used to examine a postage stamp (c) an astronomical refracting telescope being used to make a sharp image of stars on an electronic detector (d) a searchlight being used to produce a beam of parallel rays from a point source (e) a camera lens being used to photograph a soccer game
- A converging lens made of crown glass has a focal length of 15.0 cm when used in air. If the lens is immersed in water, what is its focal length? (a) negative

- (b) less than 15.0 cm (c) equal to 15.0 cm (d) greater than 15.0 cm (e) none of those answers
12. A converging lens of focal length 8 cm forms a sharp image of an object on a screen. What is the smallest possible distance between the object and the screen? (a) 0 (b) 4 cm (c) 8 cm (d) 16 cm (e) 32 cm
13. (i) When an image of an object is formed by a plane mirror, which of the following statements is *always* true? More than one statement may be correct. (a) The image is virtual. (b) The image is real. (c) The image is upright. (d) The image is inverted. (e) None of those statements is always true. (ii) When the image of an object is formed by a concave mirror, which of the preceding statements are *always* true? (iii) When the image of an object is formed by a convex mirror, which of the preceding statements are *always* true?

14. An object, represented by a gray arrow, is placed in front of a plane mirror. Which of the diagrams in Figure OQ36.14 correctly describes the image, represented by the pink arrow?

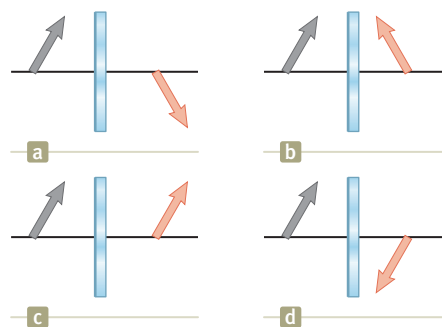


Figure OQ36.14

Conceptual Questions

1. denotes answer available in *Student Solutions Manual/Study Guide*

1. A converging lens of short focal length can take light diverging from a small source and refract it into a beam of parallel rays. A Fresnel lens as shown in Figure 36.27 is used in a lighthouse for this purpose. A concave mirror can take light diverging from a small source and reflect it into a beam of parallel rays. (a) Is it possible to make a Fresnel mirror? (b) Is this idea original, or has it already been done?
2. Explain this statement: “The focal point of a lens is the location of the image of a point object at infinity.” (a) Discuss the notion of infinity in real terms as it applies to object distances. (b) Based on this statement, can you think of a simple method for determining the focal length of a converging lens?
3. Why do some emergency vehicles have the symbol $\Sigma\text{CNAJUBMA}$ written on the front?
4. Explain why a mirror cannot give rise to chromatic aberration.
5. (a) Can a converging lens be made to diverge light if it is placed into a liquid? (b) **What If?** What about a converging mirror?
6. Explain why a fish in a spherical goldfish bowl appears larger than it really is.
7. In Figure 36.26a, assume the gray object arrow is replaced by one that is much taller than the lens. (a) How many rays from the top of the object will strike the lens? (b) How many principal rays can be drawn in a ray diagram?
8. Lenses used in eyeglasses, whether converging or diverging, are always designed so that the middle of the lens curves away from the eye like the center lenses of Figures 36.25a and 36.25b. Why?
9. Suppose you want to use a converging lens to project the image of two trees onto a screen. As shown in Figure CQ36.9, one tree is a distance x from the lens and the other is at $2x$. You adjust the screen so that the near tree is in focus. If you now want the far tree to be in focus, do you move the screen toward or away from the lens?

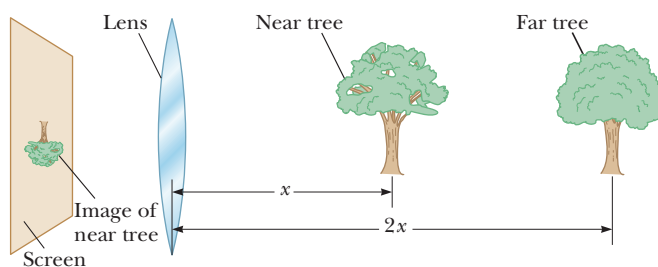


Figure CQ36.9

10. Consider a spherical concave mirror with the object located to the left of the mirror beyond the focal point. Using ray diagrams, show that the image moves to the left as the object approaches the focal point.
11. In Figures CQ36.11a and CQ36.11b, which glasses correct nearsightedness and which correct farsightedness?



Figure CQ36.11 Conceptual Questions 11 and 12.

12. Bethany tries on either her hyperopic grandfather's or her myopic brother's glasses and complains, “Everything looks blurry.” Why do the eyes of a person wearing glasses not look blurry? (See Fig. CQ36.11.)

13. In a Jules Verne novel, a piece of ice is shaped to form a magnifying lens, focusing sunlight to start a fire. Is that possible?
14. A solar furnace can be constructed by using a concave mirror to reflect and focus sunlight into a furnace enclosure. What factors in the design of the reflecting mirror would guarantee very high temperatures?
15. Figure CQ36.15 shows a lithograph by M. C. Escher titled *Hand with Reflecting Sphere (Self-Portrait in Spherical Mirror)*. Escher said about the work: “The picture shows a spherical mirror, resting on a left hand. But as a print is the reverse of the original drawing on stone, it was my right hand that you see depicted. (Being left-handed, I needed my left hand to make the drawing.) Such a globe reflection collects almost one’s whole surroundings in one disk-shaped image. The whole room, four walls,

M.C. Escher's "Hand with Reflecting Sphere" © 2009
The M.C. Escher Company-Holland. All rights reserved.
www.mcescher.com



Figure CQ36.15

the floor, and the ceiling, everything, albeit distorted, is compressed into that one small circle. Your own head, or more exactly the point between your eyes, is the absolute center. No matter how you turn or twist yourself, you can't get out of that central point. You are immovably the focus, the unshakable core, of your world.” Comment on the accuracy of Escher's description.

16. If a cylinder of solid glass or clear plastic is placed above the words LEAD OXIDE and viewed from the side as shown in Figure CQ36.16, the word LEAD appears inverted, but the word OXIDE does not. Explain.

Richard Megna/Fundamental Photographs, NYC




Figure CQ36.16

17. Do the equations $1/p + 1/q = 1/f$ and $M = -q/p$ apply to the image formed by a flat mirror? Explain your answer.

Problems

ENHANCED

WebAssign

The problems found in this chapter may be assigned online in Enhanced WebAssign

1. straightforward; 2. intermediate; 3. challenging

1. full solution available in the *Student Solutions Manual/Study Guide*

AMT

Analysis Model tutorial available in Enhanced WebAssign

GP

Guided Problem

M

Master It tutorial available in Enhanced WebAssign

W

Watch It video solution available in Enhanced WebAssign

Section 36.1 Images Formed by Flat Mirrors

1. Determine the minimum height of a vertical flat mirror in which a person 178 cm tall can see his or her full image. *Suggestion:* Drawing a ray diagram would be helpful.
2. In a choir practice room, two parallel walls are 5.30 m apart. The singers stand against the north wall. The organist faces the south wall, sitting 0.800 m away from it. To enable her to see the choir, a flat mirror 0.600 m wide is mounted on the south wall, straight in front of her. What width of the north wall can the organist see? *Suggestion:* Draw a top-view diagram to justify your answer.
3. (a) Does your bathroom mirror show you older or younger than you actually are? (b) Compute an order-of-magnitude estimate for the age difference based on data you specify.
4. A person walks into a room that has two flat mirrors on opposite walls. The mirrors produce multiple images of the person. Consider *only* the images formed in the

mirror on the left. When the person is 2.00 m from the mirror on the left wall and 4.00 m from the mirror on the right wall, find the distance from the person to the first three images seen in the mirror on the left wall.

5. A periscope (Fig. P36.5) is useful for viewing objects that cannot be seen directly. It can be used in submarines and when watching golf matches or parades from behind a crowd of people. Suppose the object is a distance p_1 from the upper mirror and the centers

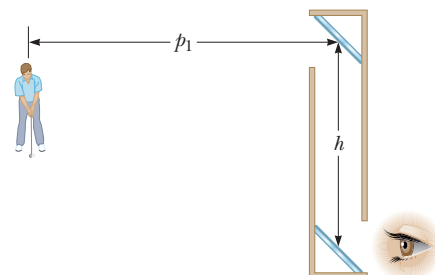


Figure P36.5

- of the two flat mirrors are separated by a distance h .
- (a) What is the distance of the final image from the lower mirror? (b) Is the final image real or virtual? (c) Is it upright or inverted? (d) What is its magnification? (e) Does it appear to be left–right reversed?
6. Two flat mirrors have their reflecting surfaces facing each other, with the edge of one mirror in contact with an edge of the other, so that the angle between the mirrors is α . When an object is placed between the mirrors, a number of images are formed. In general, if the angle α is such that $n\alpha = 360^\circ$, where n is an integer, the number of images formed is $n - 1$. Graphically, find all the image positions for the case $n = 6$ when a point object is between the mirrors (but not on the angle bisector).
7. Two plane mirrors stand facing each other, 3.00 m apart, and a woman stands between them. The woman looks at one of the mirrors from a distance of 1.00 m and holds her left arm out to the side of her body with the palm of her hand facing the closer mirror. (a) What is the apparent position of the closest image of her left hand, measured perpendicularly from the surface of the mirror in front of her? (b) Does it show the palm of her hand or the back of her hand? (c) What is the position of the next closest image? (d) Does it show the palm of her hand or the back of her hand? (e) What is the position of the third closest image? (f) Does it show the palm of her hand or the back of her hand? (g) Which of the images are real and which are virtual?

Section 36.2 Images Formed by Spherical Mirrors

8. An object is placed 50.0 cm from a concave spherical mirror with focal length of magnitude 20.0 cm. (a) Find the location of the image. (b) What is the magnification of the image? (c) Is the image real or virtual? (d) Is the image upright or inverted?
9. A concave spherical mirror has a radius of curvature of magnitude 20.0 cm. (a) Find the location of the image for object distances of (i) 40.0 cm, (ii) 20.0 cm, and (iii) 10.0 cm. For each case, state whether the image is (b) real or virtual and (c) upright or inverted. (d) Find the magnification in each case.
10. An object is placed 20.0 cm from a concave spherical mirror having a focal length of magnitude 40.0 cm. (a) Use graph paper to construct an accurate ray diagram for this situation. (b) From your ray diagram, determine the location of the image. (c) What is the magnification of the image? (d) Check your answers to parts (b) and (c) using the mirror equation.
11. A convex spherical mirror has a radius of curvature of magnitude 40.0 cm. Determine the position of the virtual image and the magnification for object distances of (a) 30.0 cm and (b) 60.0 cm. (c) Are the images in parts (a) and (b) upright or inverted?
12. At an intersection of hospital hallways, a convex spherical mirror is mounted high on a wall to help people avoid collisions. The magnitude of the mirror's radius of curvature is 0.550 m. (a) Locate the image of a patient 10.0 m from the mirror. (b) Indicate whether the image is upright or inverted. (c) Determine the magnification of the image.
13. An object of height 2.00 cm is placed 30.0 cm from a convex spherical mirror of focal length of magnitude 10.0 cm. (a) Find the location of the image. (b) Indicate whether the image is upright or inverted. (c) Determine the height of the image.
14. A dentist uses a spherical mirror to examine a tooth. The tooth is 1.00 cm in front of the mirror, and the image is formed 10.0 cm behind the mirror. Determine (a) the mirror's radius of curvature and (b) the magnification of the image.
15. A large hall in a museum has a niche in one wall. On the floor plan, the niche appears as a semicircular indentation of radius 2.50 m. A tourist stands on the centerline of the niche, 2.00 m out from its deepest point, and whispers "Hello." Where is the sound concentrated after reflection from the niche?
16. *Why is the following situation impossible?* At a blind corner in an outdoor shopping mall, a convex mirror is mounted so pedestrians can see around the corner before arriving there and bumping into someone traveling in the perpendicular direction. The installers of the mirror failed to take into account the position of the Sun, and the mirror focuses the Sun's rays on a nearby bush and sets it on fire.
17. To fit a contact lens to a patient's eye, a *keratometer* can be used to measure the curvature of the eye's front surface, the cornea. This instrument places an illuminated object of known size at a known distance p from the cornea. The cornea reflects some light from the object, forming an image of the object. The magnification M of the image is measured by using a small viewing telescope that allows comparison of the image formed by the cornea with a second calibrated image projected into the field of view by a prism arrangement. Determine the radius of curvature of the cornea for the case $p = 30.0$ cm and $M = 0.0130$.
18. A certain Christmas tree ornament is a silver sphere having a diameter of 8.50 cm. (a) If the size of an image created by reflection in the ornament is three-fourths the reflected object's actual size, determine the object's location. (b) Use a principal-ray diagram to determine whether the image is upright or inverted.
19. (a) A concave spherical mirror forms an inverted image 4.00 times larger than the object. Assuming the distance between object and image is 0.600 m, find the focal length of the mirror. (b) **What If?** Suppose the mirror is convex. The distance between the image and the object is the same as in part (a), but the image is 0.500 the size of the object. Determine the focal length of the mirror.
20. (a) A concave spherical mirror forms an inverted image different in size from the object by a factor $a > 1$. The distance between object and image is d . Find the focal length of the mirror. (b) **What If?** Suppose the mirror is convex, an upright image is formed, and $a < 1$. Determine the focal length of the mirror.

21. An object 10.0 cm tall is placed at the zero mark of a **W** meterstick. A spherical mirror located at some point on the meterstick creates an image of the object that is upright, 4.00 cm tall, and located at the 42.0-cm mark of the meterstick. (a) Is the mirror convex or concave? (b) Where is the mirror? (c) What is the mirror's focal length?

22. A concave spherical mirror has a radius of curvature of magnitude 24.0 cm. (a) Determine the object position for which the resulting image is upright and larger than the object by a factor of 3.00. (b) Draw a ray diagram to determine the position of the image. (c) Is the image real or virtual?

23. A dedicated sports car enthusiast polishes the inside **W** and outside surfaces of a hubcap that is a thin section of a sphere. When she looks into one side of the hubcap, she sees an image of her face 30.0 cm in back of the hubcap. She then flips the hubcap over and sees another image of her face 10.0 cm in back of the hubcap. (a) How far is her face from the hubcap? (b) What is the radius of curvature of the hubcap?

24. A convex spherical mirror has a focal length of magnitude 8.00 cm. (a) What is the location of an object for which the magnitude of the image distance is one-third the magnitude of the object distance? (b) Find the magnification of the image and (c) state whether it is upright or inverted.

25. A spherical mirror is to be used to form an image **M** 5.00 times the size of an object on a screen located 5.00 m from the object. (a) Is the mirror required concave or convex? (b) What is the required radius of curvature of the mirror? (c) Where should the mirror be positioned relative to the object?

26. Review. A ball is dropped at $t = 0$ from rest 3.00 m **AMT** directly above the vertex of a concave spherical mirror that has a radius of curvature of magnitude 1.00 m and lies in a horizontal plane. (a) Describe the motion of the ball's image in the mirror. (b) At what instant or instants do the ball and its image coincide?

27. You unconsciously estimate the distance to an object from the angle it subtends in your field of view. This angle θ in radians is related to the linear height of the object h and to the distance d by $\theta = h/d$. Assume you are driving a car and another car, 1.50 m high, is 24.0 m behind you. (a) Suppose your car has a flat passenger-side rearview mirror, 1.55 m from your eyes. How far from your eyes is the image of the car following you? (b) What angle does the image subtend in your field of view? (c) **What If?** Now suppose your car has a convex rearview mirror with a radius of curvature of magnitude 2.00 m (as suggested in Fig. 36.15). How far from your eyes is the image of the car behind you? (d) What angle does the image subtend at your eyes? (e) Based on its angular size, how far away does the following car appear to be?

28. A man standing 1.52 m in front of a shaving mirror produces an inverted image 18.0 cm in front of it. How close **M** to the mirror should he stand if he wants to form an upright image of his chin that is twice the chin's actual size?

Section 36.3 Images Formed by Refraction

29. One end of a long glass rod ($n = 1.50$) is formed into a convex surface with a radius of curvature of magnitude 6.00 cm. An object is located in air along the axis of the rod. Find the image positions corresponding to object distances of (a) 20.0 cm, (b) 10.0 cm, and (c) 3.00 cm from the convex end of the rod.

30. A cubical block of ice 50.0 cm on a side is placed over a speck of dust on a level floor. Find the location of the image of the speck as viewed from above. The index of refraction of ice is 1.309.

31. The top of a swimming pool is at ground level. If the pool is 2.00 m deep, how far below ground level does the bottom of the pool appear to be located when (a) the pool is completely filled with water? (b) When it is filled halfway with water?

32. The magnification of the image formed by a refracting surface is given by

$$M = -\frac{n_1 q}{n_2 p}$$

where n_1 , n_2 , p , and q are defined as they are for Figure 36.17 and Equation 36.8. A paperweight is made of a solid glass hemisphere with index of refraction 1.50. The radius of the circular cross section is 4.00 cm. The hemisphere is placed on its flat surface, with the center directly over a 2.50-mm-long line drawn on a sheet of paper. What is the length of this line as seen by someone looking vertically down on the hemisphere?

33. A flint glass plate rests on the bottom of an aquarium tank. The plate is 8.00 cm thick (vertical dimension) and is covered with a layer of water 12.0 cm deep. Calculate the apparent thickness of the plate as viewed from straight above the water.

34. Figure P36.34 shows a curved surface separating a material with index of refraction n_1 from a material with index n_2 . The surface forms an image I of object O . The ray shown in red passes through the surface along a radial line. Its angles of incidence and refraction are both zero, so its direction does not change at the surface. For the ray shown in blue, the direction changes according to Snell's law, $n_1 \sin \theta_1 = n_2 \sin \theta_2$. For paraxial rays, we assume θ_1 and θ_2 are small, so we may write $n_1 \tan \theta_1 = n_2 \tan \theta_2$. The magnification is defined as $M = h'/h$. Prove that the magnification is given by $M = -n_1 q / n_2 p$.

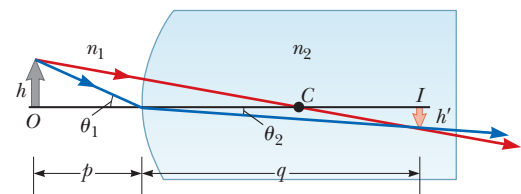


Figure P36.34

35. A glass sphere ($n = 1.50$) with a radius of 15.0 cm has a tiny air bubble 5.00 cm above its center. The sphere is viewed looking down along the extended radius containing the bubble. What is the apparent depth of the bubble below the surface of the sphere? **M**

36. As shown in Figure P36.36, Ben and Jacob check out an aquarium that has a curved front made of plastic with uniform thickness and a radius of curvature of magnitude $R = 2.25$ m. (a) Locate the images of fish that are located (i) 5.00 cm and (ii) 25.0 cm from the front wall of the aquarium. (b) Find the magnification of images (i) and (ii) from the previous part. (See Problem 32 to find an expression for the magnification of an image formed by a refracting surface.) (c) Explain why you don't need to know the refractive index of the plastic to solve this problem. (d) If this aquarium were very long from front to back, could the image of a fish ever be farther from the front surface than the fish itself is? (e) If not, explain why not. If so, give an example and find the magnification.



Figure P36.36

37. A goldfish is swimming at 2.00 cm/s toward the front wall of a rectangular aquarium. What is the apparent speed of the fish measured by an observer looking in from outside the front wall of the tank?

Section 36.4 Images Formed by Thin Lenses

38. A thin lens has a focal length of 25.0 cm. Locate and describe the image when the object is placed (a) 26.0 cm and (b) 24.0 cm in front of the lens.
39. An object located 32.0 cm in front of a lens forms an image on a screen 8.00 cm behind the lens. (a) Find the focal length of the lens. (b) Determine the magnification. (c) Is the lens converging or diverging?
40. An object is located 20.0 cm to the left of a diverging lens having a focal length $f = -32.0$ cm. Determine (a) the location and (b) the magnification of the image. (c) Construct a ray diagram for this arrangement.
41. The projection lens in a certain slide projector is a single thin lens. A slide 24.0 mm high is to be projected so that its image fills a screen 1.80 m high. The slide-to-screen distance is 3.00 m. (a) Determine the focal length of the projection lens. (b) How far from the slide should the lens of the projector be placed so as to form the image on the screen?
42. An object's distance from a converging lens is 5.00 times the focal length. (a) Determine the location of the image. Express the answer as a fraction of the focal

length. (b) Find the magnification of the image and indicate whether it is (c) upright or inverted and (d) real or virtual.

43. A contact lens is made of plastic with an index of refraction of 1.50. The lens has an outer radius of curvature of +2.00 cm and an inner radius of curvature of +2.50 cm. What is the focal length of the lens?
44. A converging lens has a focal length of 10.0 cm. Construct accurate ray diagrams for object distances of (i) 20.0 cm and (ii) 5.00 cm. (a) From your ray diagrams, determine the location of each image. (b) Is the image real or virtual? (c) Is the image upright or inverted? (d) What is the magnification of the image? (e) Compare your results with the values found algebraically. (f) Comment on difficulties in constructing the graph that could lead to differences between the graphical and algebraic answers.
45. A converging lens has a focal length of 10.0 cm. Locate the object if a real image is located at a distance from the lens of (a) 20.0 cm and (b) 50.0 cm. **What If?** Redo the calculations if the images are virtual and located at a distance from the lens of (c) 20.0 cm and (d) 50.0 cm.
46. A diverging lens has a focal length of magnitude 20.0 cm. (a) Locate the image for object distances of (i) 40.0 cm, (ii) 20.0 cm, and (iii) 10.0 cm. For each case, state whether the image is (b) real or virtual and (c) upright or inverted. (d) For each case, find the magnification.

47. The nickel's image in Figure P36.47 has twice the diameter of the nickel and is 2.84 cm from the lens. Determine the focal length of the lens.



Figure P36.47

48. Suppose an object has thickness dp so that it extends from object distance p to $p + dp$. (a) Prove that the thickness dq of its image is given by $(-q^2/p^2)dp$. (b) The longitudinal magnification of the object is $M_{\text{long}} = dq/dp$. How is the longitudinal magnification related to the lateral magnification M ?
49. The left face of a biconvex lens has a radius of curvature of magnitude 12.0 cm, and the right face has a radius of curvature of magnitude 18.0 cm. The index of refraction of the glass is 1.44. (a) Calculate the focal length of the lens for light incident from the left. (b) **What If?** After the lens is turned around to interchange the radii of curvature of the two faces, calculate the focal length of the lens for light incident from the left.
50. In Figure P36.50, a thin converging lens of focal length 14.0 cm forms an image of the square $abcd$, which is $h_c = h_b = 10.0$ cm high and lies between distances of $p_d = 20.0$ cm and $p_a = 30.0$ cm from the lens. Let a' , b' , c' , and d' represent the respective corners of the image. Let q_a represent the image distance for points a' and b' , q_d represent the image distance for points c' and d' ,

h'_b represent the distance from point b' to the axis, and h'_c represent the height of c' . (a) Find q_a , q_d , h'_b , and h'_c . (b) Make a sketch of the image. (c) The area of the object is 100 cm^2 . By carrying out the following steps, you will evaluate the area of the image. Let q represent the image distance of any point between a' and d' , for which the object distance is p . Let h' represent the distance from the axis to the point at the edge of the image between b' and c' at image distance q . Demonstrate that

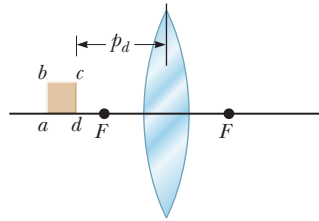


Figure P36.50

$$|h'| = 10.0q \left(\frac{1}{14.0} - \frac{1}{q} \right)$$

where h' and q are in centimeters. (d) Explain why the geometric area of the image is given by

$$\int_{q_a}^{q_d} |h'| dq$$

(e) Carry out the integration to find the area of the image.

51. An antelope is at a distance of 20.0 m from a converging lens of focal length 30.0 cm. The lens forms an image of the animal. (a) If the antelope runs away from the lens at a speed of 5.00 m/s, how fast does the image move? (b) Does the image move toward or away from the lens?
52. Why is the following situation impossible? An illuminated object is placed a distance $d = 2.00 \text{ m}$ from a screen. By placing a converging lens of focal length $f = 60.0 \text{ cm}$ at two locations between the object and the screen, a sharp, real image of the object can be formed on the screen. In one location of the lens, the image is larger than the object, and in the other, the image is smaller.
53. A 1.00-cm-high object is placed 4.00 cm to the left of a converging lens of focal length 8.00 cm. A diverging lens of focal length -16.00 cm is 6.00 cm to the right of the converging lens. Find the position and height of the final image. Is the image inverted or upright? Real or virtual?

Section 36.5 Lens Aberrations

54. The magnitudes of the radii of curvature are 32.5 cm and 42.5 cm for the two faces of a biconcave lens. The glass has index of refraction 1.53 for violet light and 1.51 for red light. For a very distant object, locate (a) the image formed by violet light and (b) the image formed by red light.
55. Two rays traveling parallel to the principal axis strike a large plano-convex lens having a refractive index of 1.60 (Fig. P36.55). If the convex face is spherical, a ray near the edge does not pass through the focal point (spherical aberration occurs). Assume this face has a radius of curvature of $R = 20.0 \text{ cm}$ and the two rays are at distances $h_1 = 0.500 \text{ cm}$ and $h_2 = 12.0 \text{ cm}$ from the

principal axis. Find the difference Δx in the positions where each crosses the principal axis.

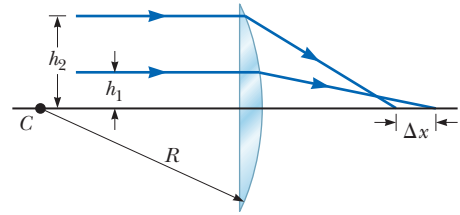


Figure P36.55

Section 36.6 The Camera

56. A camera is being used with a correct exposure at $f/4$ and a shutter speed of $\frac{1}{15} \text{ s}$. In addition to the f -numbers listed in Section 36.6, this camera has f -numbers $f/1$, $f/1.4$, and $f/2$. To photograph a rapidly moving subject, the shutter speed is changed to $\frac{1}{125} \text{ s}$. Find the new f -number setting needed on this camera to maintain satisfactory exposure.
57. Figure 36.33 diagrams a cross section of a camera. It has a single lens of focal length 65.0 mm, which is to form an image on the CCD at the back of the camera. Suppose the position of the lens has been adjusted to focus the image of a distant object. How far and in what direction must the lens be moved to form a sharp image of an object that is 2.00 m away?

Section 36.7 The Eye

58. A nearsighted person cannot see objects clearly beyond 25.0 cm (her far point). If she has no astigmatism and contact lenses are prescribed for her, what (a) power and (b) type of lens are required to correct her vision?
59. The near point of a person's eye is 60.0 cm. To see objects clearly at a distance of 25.0 cm, what should be the (a) focal length and (b) power of the appropriate corrective lens? (Neglect the distance from the lens to the eye.)
60. A person sees clearly wearing eyeglasses that have a power of -4.00 diopters when the lenses are 2.00 cm in front of the eyes. (a) What is the focal length of the lens? (b) Is the person nearsighted or farsighted? (c) If the person wants to switch to contact lenses placed directly on the eyes, what lens power should be prescribed?
61. The accommodation limits for a nearsighted person's eyes are 18.0 cm and 80.0 cm. When he wears his glasses, he can see faraway objects clearly. At what minimum distance is he able to see objects clearly?
62. A certain child's near point is 10.0 cm; her far point (with eyes relaxed) is 125 cm. Each eye lens is 2.00 cm from the retina. (a) Between what limits, measured in diopters, does the power of this lens–cornea combination vary? (b) Calculate the power of the eyeglass lens the child should use for relaxed distance vision. Is the lens converging or diverging?
63. A person is to be fitted with bifocals. She can see clearly when the object is between 30 cm and 1.5 m

from the eye. (a) The upper portions of the bifocals (Fig. P36.63) should be designed to enable her to see distant objects clearly. What power should they have? (b) The lower portions of the bifocals should enable her to see objects located 25 cm in front of the eye. What power should they have?

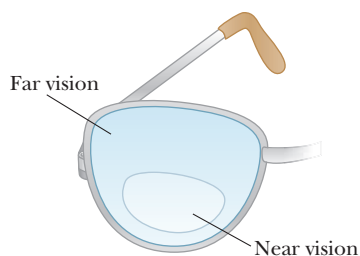


Figure P36.63

64. A simple model of the human eye ignores its lens entirely. Most of what the eye does to light happens at the outer surface of the transparent cornea. Assume that this surface has a radius of curvature of 6.00 mm and that the eyeball contains just one fluid with a refractive index of 1.40. Prove that a very distant object will be imaged on the retina, 21.0 mm behind the cornea. Describe the image.
65. A patient has a near point of 45.0 cm and far point of 85.0 cm. (a) Can a single pair of glasses correct the patient's vision? Explain the patient's options. (b) Calculate the power lens needed to correct the near point so that the patient can see objects 25.0 cm away. Neglect the eye-lens distance. (c) Calculate the power lens needed to correct the patient's far point, again neglecting the eye-lens distance.

Section 36.8 The Simple Magnifier

66. A lens that has a focal length of 5.00 cm is used as a magnifying glass. (a) To obtain maximum magnification and an image that can be seen clearly by a normal eye, where should the object be placed? (b) What is the magnification?

Section 36.9 The Compound Microscope

67. The distance between the eyepiece and the objective lens in a certain compound microscope is 23.0 cm. The focal length of the eyepiece is 2.50 cm and that of the objective is 0.400 cm. What is the overall magnification of the microscope?

Section 36.10 The Telescope

68. The refracting telescope at the Yerkes Observatory has a 1.00-m diameter objective lens of focal length 20.0 m. Assume it is used with an eyepiece of focal length 2.50 cm. (a) Determine the magnification of Mars as seen through this telescope. (b) Are the Martian polar caps right side up or upside down?
69. A certain telescope has an objective mirror with an aperture diameter of 200 mm and a focal length of 2 000 mm. It captures the image of a nebula on photographic film at its prime focus with an exposure time of 1.50 min. To produce the same light energy per unit area on the film, what is the required exposure time to photograph the same nebula with a smaller telescope that has an objective with a 60.0-mm diameter and a 900-mm focal length?

70. Astronomers often take photographs with the objective lens or mirror of a telescope alone, without an eyepiece. (a) Show that the image size h' for such a telescope is given by $h' = fh/(f - p)$, where f is the objective focal length, h is the object size, and p is the object distance. (b) **What If?** Simplify the expression in part (a) for the case in which the object distance is much greater than objective focal length. (c) The "wingspan" of the International Space Station is 108.6 m, the overall width of its solar panel configuration. When the station is orbiting at an altitude of 407 km, find the width of the image formed by a telescope objective of focal length 4.00 m.

Additional Problems

71. The lens-makers' equation applies to a lens immersed in a liquid if n in the equation is replaced by n_2/n_1 . Here n_2 refers to the index of refraction of the lens material and n_1 is that of the medium surrounding the lens. (a) A certain lens has focal length 79.0 cm in air and index of refraction 1.55. Find its focal length in water. (b) A certain mirror has focal length 79.0 cm in air. Find its focal length in water.
72. A real object is located at the zero end of a meterstick. A large concave spherical mirror at the 100-cm end of the meterstick forms an image of the object at the 70.0-cm position. A small convex spherical mirror placed at the 20.0-cm position forms a final image at the 10.0-cm point. What is the radius of curvature of the convex mirror?
73. The distance between an object and its upright image is 20.0 cm. If the magnification is 0.500, what is the focal length of the lens being used to form the image?
74. The distance between an object and its upright image is d . If the magnification is M , what is the focal length of the lens being used to form the image?
75. A person decides to use an old pair of eyeglasses to make some optical instruments. He knows that the near point in his left eye is 50.0 cm and the near point in his right eye is 100 cm. (a) What is the maximum angular magnification he can produce in a telescope? (b) If he places the lenses 10.0 cm apart, what is the maximum overall magnification he can produce in a microscope? *Hint:* Go back to basics and use the thin lens equation to solve part (b).
76. You are designing an endoscope for use inside an air-filled body cavity. A lens at the end of the endoscope will form an image covering the end of a bundle of optical fibers. This image will then be carried by the optical fibers to an eyepiece lens at the outside end of the fiberscope. The radius of the bundle is 1.00 mm. The scene within the body that is to appear within the image fills a circle of radius 6.00 cm. The lens will be located 5.00 cm from the tissues you wish to observe. (a) How far should the lens be located from the end of an optical fiber bundle? (b) What is the focal length of the lens required?
77. The lens and mirror in Figure P36.77 are separated by $d = 1.00$ m and have focal lengths of +80.0 cm and

-50.0 cm, respectively. An object is placed $p = 1.00$ m to the left of the lens as shown. (a) Locate the final image, formed by light that has gone through the lens twice. (b) Determine the overall magnification of the image and (c) state whether the image is upright or inverted.

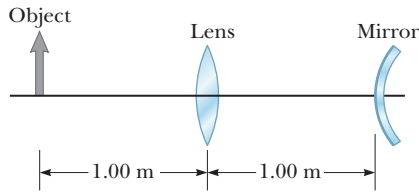


Figure P36.77

78. Two converging lenses having focal lengths of $f_1 = 10.0$ cm and $f_2 = 20.0$ cm are placed a distance $d = 50.0$ cm apart as shown in Figure P36.78. The image due to light passing through both lenses is to be located between the lenses at the position $x = 31.0$ cm indicated. (a) At what value of p should the object be positioned to the left of the first lens? (b) What is the magnification of the final image? (c) Is the final image upright or inverted? (d) Is the final image real or virtual?

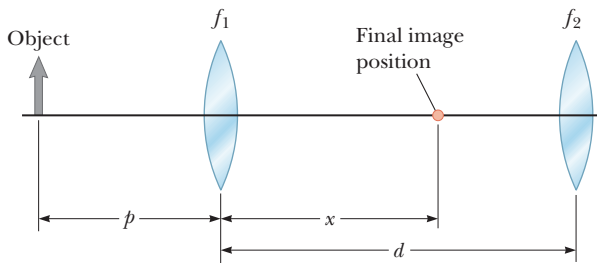


Figure P36.78

79. Figure P36.79 shows a piece of glass with index of refraction $n = 1.50$ surrounded by air. The ends are hemispheres with radii $R_1 = 2.00$ cm and $R_2 = 4.00$ cm, and the centers of the hemispherical ends are separated by a distance of $d = 8.00$ cm. A point object is in air, a distance $p = 1.00$ cm from the left end of the glass. (a) Locate the image of the object due to refraction at the two spherical surfaces. (b) Is the final image real or virtual?

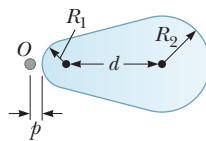


Figure P36.79

80. An object is originally at the $x_i = 0$ cm position of a meterstick located on the x axis. A converging lens of focal length 26.0 cm is fixed at the position 32.0 cm. Then we gradually slide the object to the position $x_f = 12.0$ cm. (a) Find the location x' of the object's image as a function of the object position x . (b) Describe the pattern of the image's motion with reference to a graph or a table of values. (c) As the object moves 12.0 cm to the right, how far does the image move? (d) In what direction or directions?

81. The object in Figure P36.81 is midway between the lens and the mirror, which are separated by a distance

$d = 25.0$ cm. The magnitude of the mirror's radius of curvature is 20.0 cm, and the lens has a focal length of -16.7 cm. (a) Considering only the light that leaves the object and travels first toward the mirror, locate the final image formed by this system. (b) Is this image real or virtual? (c) Is it upright or inverted? (d) What is the overall magnification?

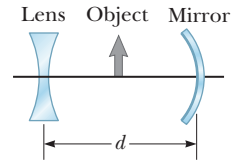


Figure P36.81

82. In many applications, it is necessary to expand or decrease the diameter of a beam of parallel rays of light, which can be accomplished by using a converging lens and a diverging lens in combination. Suppose you have a converging lens of focal length 21.0 cm and a diverging lens of focal length -12.0 cm. (a) How can you arrange these lenses to increase the diameter of a beam of parallel rays? (b) By what factor will the diameter increase?
83. **Review.** A spherical lightbulb of diameter 3.20 cm radiates light equally in all directions, with power 4.50 W. (a) Find the light intensity at the surface of the lightbulb. (b) Find the light intensity 7.20 m away from the center of the lightbulb. (c) At this 7.20 -m distance, a lens is set up with its axis pointing toward the lightbulb. The lens has a circular face with a diameter of 15.0 cm and has a focal length of 35.0 cm. Find the diameter of the lightbulb's image. (d) Find the light intensity at the image.
84. A parallel beam of light enters a glass hemisphere perpendicular to the flat face as shown in Figure P36.84. The magnitude of the radius of the hemisphere is $R = 6.00$ cm, and its index of refraction is $n = 1.560$. Assuming paraxial rays, determine the point at which the beam is focused.

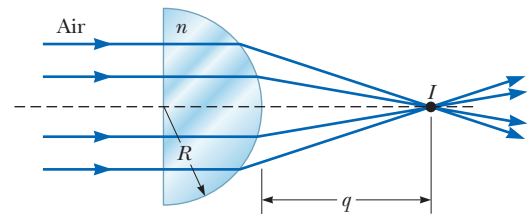


Figure P36.84

85. Two lenses made of kinds of glass having different indices of refraction n_1 and n_2 are cemented together to form an *optical doublet*. Optical doublets are often used to correct chromatic aberrations in optical devices. The first lens of a certain doublet has index of refraction n_1 , one flat side, and one concave side with a radius of curvature of magnitude R . The second lens has index of refraction n_2 and two convex sides with radii of curvature also of magnitude R . Show that the doublet can be modeled as a single thin lens with a focal length described by

$$\frac{1}{f} = \frac{2n_2 - n_1 - 1}{R}$$

86. Why is the following situation impossible? Consider the lens-mirror combination shown in Figure P36.86 on page 1132. The lens has a focal length of $f_L = 0.200$ m,

and the mirror has a focal length of $f_M = 0.500$ m. The lens and mirror are placed a distance $d = 1.30$ m apart, and an object is placed at $p = 0.300$ m from the lens. By moving a screen to various positions to the left of the lens, a student finds two different positions of the screen that produce a sharp image of the object. One of these positions corresponds to light leaving the object and traveling to the left through the lens. The other position corresponds to light traveling to the right from the object, reflecting from the mirror and then passing through the lens.

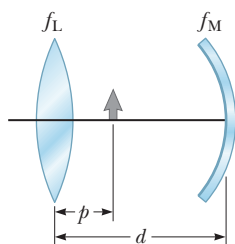


Figure P36.86

Problems 86 and 97.

87. An object is placed 12.0 cm to the left of a diverging lens of focal length -6.00 cm. A converging lens of focal length 12.0 cm is placed a distance d to the right of the diverging lens. Find the distance d so that the final image is infinitely far away to the right.

88. An object is placed a distance p to the left of a diverging lens of focal length f_1 . A converging lens of focal length f_2 is placed a distance d to the right of the diverging lens. Find the distance d so that the final image is infinitely far away to the right.

89. An observer to the right of the mirror–lens combination shown in Figure P36.89 (not to scale) sees two real images that are the same size and in the same location. One image is upright, and the other is inverted. Both images are 1.50 times larger than the object. The lens has a focal length of 10.0 cm. The lens and mirror are separated by 40.0 cm. Determine the focal length of the mirror.

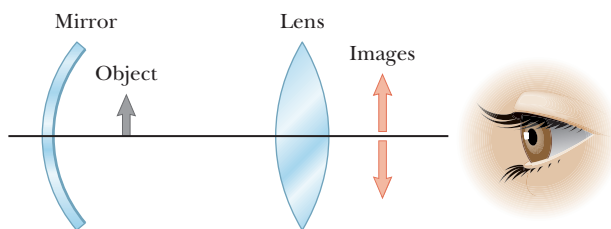


Figure P36.89

90. In a darkened room, a burning candle is placed 1.50 m from a white wall. A lens is placed between the candle and the wall at a location that causes a larger, inverted image to form on the wall. When the lens is in this position, the object distance is p_1 . When the lens is moved 90.0 cm toward the wall, another image of the candle is formed on the wall. From this information, we wish to find p_1 and the focal length of the lens. (a) From the lens equation for the first position of the lens, write an equation relating the focal length f of the lens to the object distance p_1 , with no other variables in the equation. (b) From the lens equation for the second position of the lens, write another equation relat-

ing the focal length f of the lens to the object distance p_1 . (c) Solve the equations in parts (a) and (b) simultaneously to find p_1 . (d) Use the value in part (c) to find the focal length f of the lens.

- 91.** The disk of the Sun subtends an angle of 0.533° at the Earth. What are (a) the position and (b) the diameter of the solar image formed by a concave spherical mirror with a radius of curvature of magnitude 3.00 m?
- 92.** An object 2.00 cm high is placed 40.0 cm to the left of a converging lens having a focal length of 30.0 cm. A diverging lens with a focal length of -20.0 cm is placed 110 cm to the right of the converging lens. Determine (a) the position and (b) the magnification of the final image. (c) Is the image upright or inverted? (d) **What If?** Repeat parts (a) through (c) for the case in which the second lens is a converging lens having a focal length of 20.0 cm.

Challenge Problems

- 93.** Assume the intensity of sunlight is 1.00 kW/m² at a particular location. A highly reflecting concave mirror is to be pointed toward the Sun to produce a power of at least 350 W at the image point. (a) Assuming the disk of the Sun subtends an angle of 0.533° at the Earth, find the required radius R_a of the circular face area of the mirror. (b) Now suppose the light intensity is to be at least 120 kW/m² at the image. Find the required relationship between R_a and the radius of curvature R of the mirror.
- 94.** A *zoom lens* system is a combination of lenses that produces a variable magnification of a fixed object as it maintains a fixed image position. The magnification is varied by moving one or more lenses along the axis. Multiple lenses are used in practice, but the effect of zooming in on an object can be demonstrated with a simple two-lens system. An object, two converging lenses, and a screen are mounted on an optical bench. Lens 1, which is to the right of the object, has a focal length of $f_1 = 5.00$ cm, and lens 2, which is to the right of the first lens, has a focal length of $f_2 = 10.0$ cm. The screen is to the right of lens 2. Initially, an object is situated at a distance of 7.50 cm to the left of lens 1, and the image formed on the screen has a magnification of +1.00. (a) Find the distance between the object and the screen. (b) Both lenses are now moved along their common axis while the object and the screen maintain fixed positions until the image formed on the screen has a magnification of +3.00. Find the displacement of each lens from its initial position in part (a). (c) Can the lenses be displaced in more than one way?
- 95.** Figure P36.95 shows a thin converging lens for which the radii of curvature of its surfaces have magnitudes of 9.00 cm and 11.0 cm. The lens is in front of a concave spherical mirror with the radius of curvature $R = 8.00$ cm. Assume the focal points F_1 and F_2 of the lens are 5.00 cm from the center of the lens. (a) Determine the index of refraction of the lens material. The lens and mirror are 20.0 cm apart, and an object is placed

8.00 cm to the left of the lens. Determine (b) the position of the final image and (c) its magnification as seen by the eye in the figure. (d) Is the final image inverted or upright? Explain.

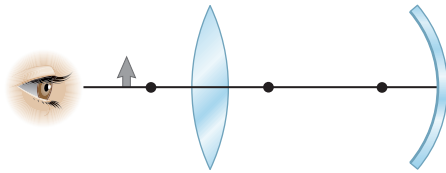


Figure P36.95

96. A floating strawberry illusion is achieved with two parabolic mirrors, each having a focal length 7.50 cm, facing each other as shown in Figure P36.96. If a strawberry is placed on the lower mirror, an image of the strawberry is formed at the small opening at the center of the top mirror, 7.50 cm above the lowest point of the bottom mirror. The position of the eye in Figure P36.96a corresponds to the view of the apparatus in Figure P36.96b. Consider the light path marked --- . Notice that this light path is blocked by the upper mirror so that the strawberry itself is not directly observable. The light path marked --- corresponds to the eye viewing the image of the strawberry that is formed at the opening at the top of the apparatus. (a) Show that the final image is formed at that location and describe its characteristics. (b) A very startling effect is to shine a flashlight beam on this image. Even at a glancing angle, the incoming light beam is seemingly reflected from the image! Explain.

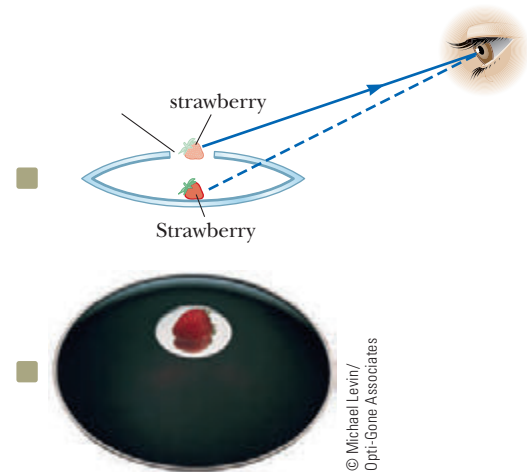


Figure P36.96

97. Consider the lens–mirror arrangement shown in Figure P36.86. There are two final image positions to the left of the lens of focal length f . One image position is due to light traveling from the object to the left and passing through the lens. The other image position is due to light traveling to the right from the object, reflecting from the mirror of focal length f and then passing through the lens. For a given object position between the lens and the mirror and measured with respect to the lens, there are two separation distances between the lens and mirror that will cause the two images described above to be at the same location. Find both positions.

- 37.1 Young's Double-Slit Experiment
- 37.2 Analysis Model: Waves in Interference
- 37.3 Intensity Distribution of the Double-Slit Interference Pattern
- 37.4 Change of Phase Due to Reflection
- 37.5 Interference in Thin Films
- 37.6 The Michelson Interferometer



The colors in many of a hummingbird's feathers are not due to pigment. The *iridescence* that makes the brilliant colors that often appear on the bird's throat and belly is due to an interference effect caused by structures in the feathers. The colors will vary with the viewing angle. (Dec Hogan/Shutterstock.com)

In Chapter 36, we studied light rays passing through a lens or reflecting from a mirror to describe the formation of images. This discussion completed our study of *ray optics*. In this chapter and in Chapter 38, we are concerned with *wave optics*, sometimes called *physical optics*, the study of interference, diffraction, and polarization of light. These phenomena cannot be adequately explained with the ray optics used in Chapters 35 and 36. We now learn how treating light as waves rather than as rays leads to a satisfying description of such phenomena.

37.1 Young's Double-Slit Experiment

In Chapter 18, we studied the waves in interference model and found that the superposition of two mechanical waves can be constructive or destructive. In constructive interference, the amplitude of the resultant wave is greater than that of either individual wave, whereas in destructive interference, the resultant amplitude is less than that of the larger wave. Light waves also interfere with one another. Fundamentally, all interference associated with light waves arises when the electromagnetic fields that constitute the individual waves combine.

Interference in light waves from two sources was first demonstrated by Thomas Young in 1801. A schematic diagram of the apparatus Young used is shown in Figure 37.1a. Plane light waves arrive at a barrier that contains two slits S_1 and S_2 . The light from S_1 and S_2 produces on a viewing screen a visible pattern of bright and dark parallel bands called **fringes** (Fig. 37.1b). When the light from S_1 and that from S_2 both arrive at a point on the screen such that constructive interference occurs at

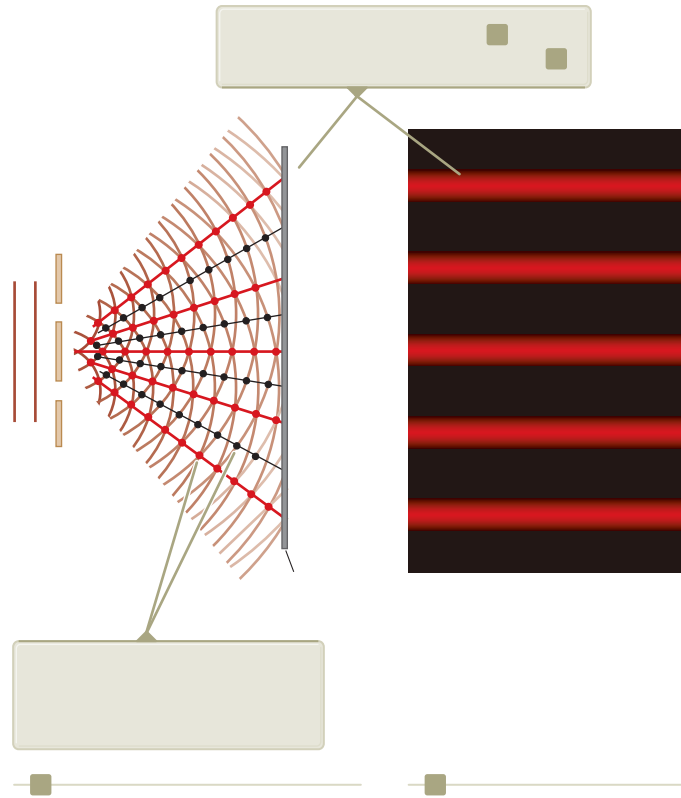


Figure 37.1 (a) Schematic diagram of Young's double-slit experiment. Slits S_1 and S_2 behave as coherent sources of light waves that produce an interference pattern on the viewing screen (drawing not to scale). (b) A simulation of an enlargement of the center of a fringe pattern formed on the viewing screen.

that location, a bright fringe appears. When the light from the two slits combines destructively at any location on the screen, a dark fringe results.

Figure 37.2 is a photograph looking down on an interference pattern produced on the surface of a water tank by two vibrating sources. The linear regions of constructive interference, such as at A , and destructive interference, such as at B , radiating from the area between the sources are analogous to the red and black lines in Figure 37.1a.

Figure 37.3 on page 1136 shows some of the ways in which two waves can combine at the screen. In Figure 37.3a, the two waves, which leave the two slits in phase, strike the screen at the central point C . Because both waves travel the same distance, they arrive at C in phase. As a result, constructive interference occurs at this location and a bright fringe is observed. In Figure 37.3b, the two waves also start in phase, but here the lower wave has to travel one wavelength farther than the upper wave to reach point D . Because the lower wave falls behind

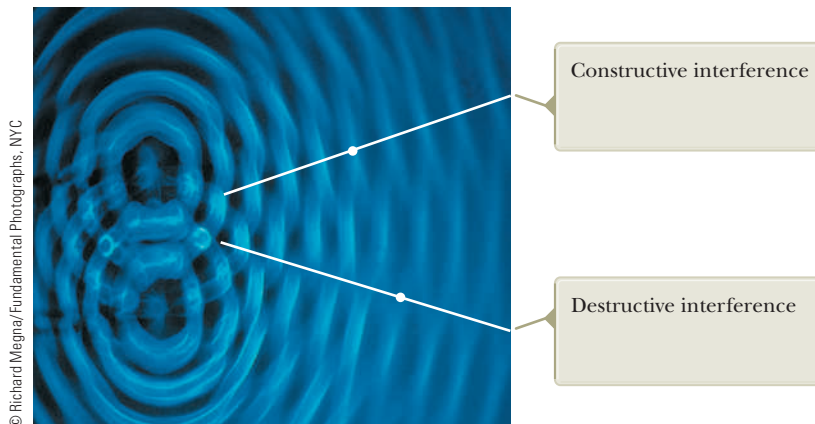
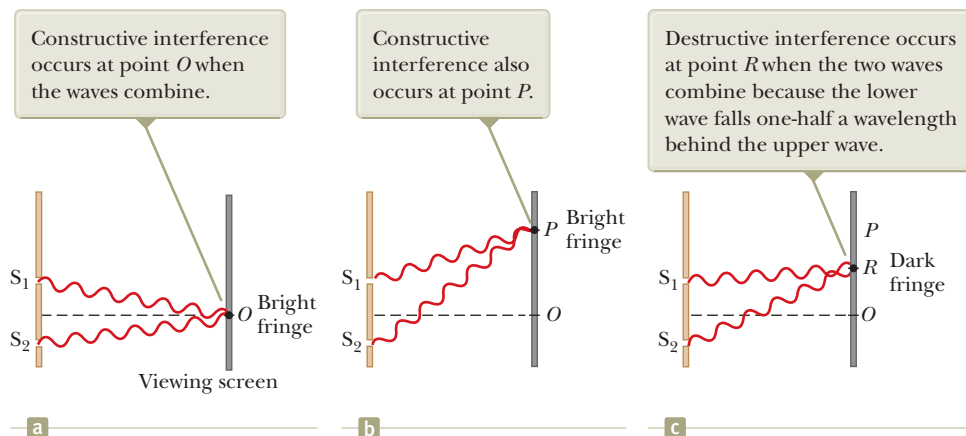


Figure 37.2 An interference pattern involving water waves is produced by two vibrating sources at the water's surface.

Figure 37.3 Waves leave the slits and combine at various points on the viewing screen. (All figures not to scale.)



the upper one by exactly one wavelength, they still arrive in phase at P and a second bright fringe appears at this location. At point R in Figure 37.3c, however, between points O and P , the lower wave has fallen half a wavelength behind the upper wave and a crest of the upper wave overlaps a trough of the lower wave, giving rise to destructive interference at point R . A dark fringe is therefore observed at this location.

If two lightbulbs are placed side by side so that light from both bulbs combines, no interference effects are observed because the light waves from one bulb are emitted independently of those from the other bulb. The emissions from the two lightbulbs do not maintain a constant phase relationship with each other over time. Light waves from an ordinary source such as a lightbulb undergo random phase changes in time intervals of less than a nanosecond. Therefore, the conditions for constructive interference, destructive interference, or some intermediate state are maintained only for such short time intervals. Because the eye cannot follow such rapid changes, no interference effects are observed. Such light sources are said to be **incoherent**.

To observe interference of waves from two sources, the following conditions must be met:

Conditions for interference ►

- The sources must be **coherent**; that is, they must maintain a constant phase with respect to each other.
- The sources should be **monochromatic**; that is, they should be of a single wavelength.

As an example, single-frequency sound waves emitted by two side-by-side loudspeakers driven by a single amplifier can interfere with each other because the two speakers are coherent. In other words, they respond to the amplifier in the same way at the same time.

A common method for producing two coherent light sources is to use a monochromatic source to illuminate a barrier containing two small openings, usually in the shape of slits, as in the case of Young's experiment illustrated in Figure 37.1. The light emerging from the two slits is coherent because a single source produces the original light beam and the two slits serve only to separate the original beam into two parts (which, after all, is what is done to the sound signal from two side-by-side loudspeakers). Any random change in the light emitted by the source occurs in both beams at the same time. As a result, interference effects can be observed when the light from the two slits arrives at a viewing screen.

If the light traveled only in its original direction after passing through the slits as shown in Figure 37.4a, the waves would not overlap and no interference pattern would be seen. Instead, as we have discussed in our treatment of Huygens's principle (Section 35.6), the waves spread out from the slits as shown in Figure 37.4b. In other words, the light deviates from a straight-line path and enters the region that

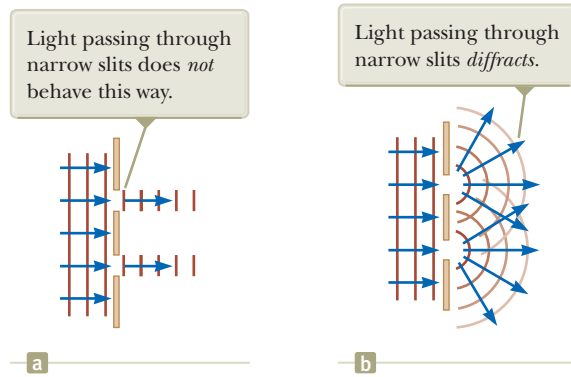


Figure 37.4 (a) If light waves did not spread out after passing through the slits, no interference would occur. (b) The light waves from the two slits overlap as they spread out, filling what we expect to be shadowed regions with light and producing interference fringes on a screen placed to the right of the slits.

would otherwise be shadowed. As noted in Section 35.3, this divergence of light from its initial line of travel is called **diffraction**.

37.2 Analysis Model: Waves in Interference

We discussed the superposition principle for waves on strings in Section 18.1, leading to a one-dimensional version of the waves in interference analysis model. In Example 18.1 on page 537, we briefly discussed a two-dimensional interference phenomenon for sound from two loudspeakers. In walking from point O to point P in Figure 18.5, the listener experienced a maximum in sound intensity at O and a minimum at P . This experience is exactly analogous to an observer looking at point O in Figure 37.3 and seeing a bright fringe and then sweeping his eyes upward to point R , where there is a minimum in light intensity.

Let's look in more detail at the two-dimensional nature of Young's experiment with the help of Figure 37.5. The viewing screen is located a perpendicular distance L from the barrier containing two slits, S_1 and S_2 (Fig. 37.5a). These slits are separated by a distance d , and the source is monochromatic. To reach any arbitrary point P in the upper half of the screen, a wave from the lower slit must travel farther than a wave from the upper slit. The extra distance traveled from the lower slit is the **path difference** δ (Greek letter delta). If we assume the rays labeled r_1 and r_2 are parallel (Fig. 37.5b), which is approximately true if L is much greater than d , then δ is given by

$$\delta = r_2 - r_1 = d \sin \theta \quad (37.1)$$

The value of δ determines whether the two waves are in phase when they arrive at point P . If δ is either zero or some integer multiple of the wavelength, the two waves

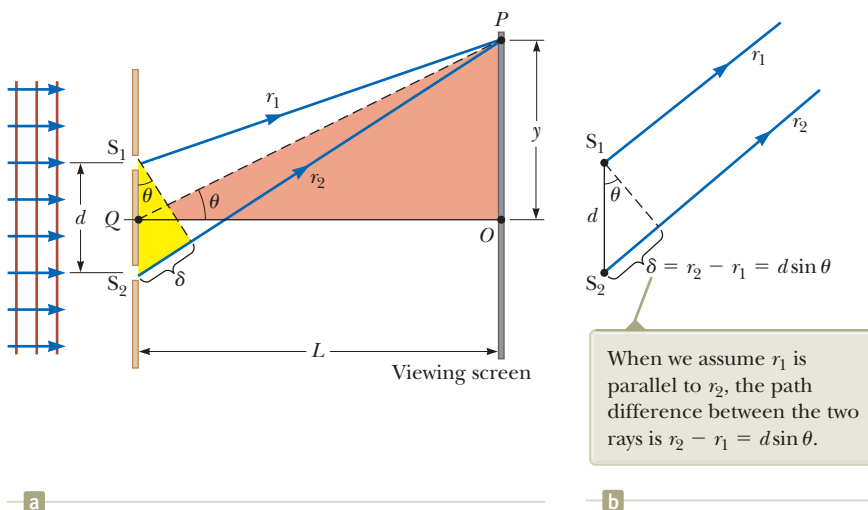


Figure 37.5 (a) Geometric construction for describing Young's double-slit experiment (not to scale). (b) The slits are represented as sources, and the outgoing light rays are assumed to be parallel as they travel to P . To achieve that in practice, it is essential that $L \gg d$.

are in phase at point P and constructive interference results. Therefore, the condition for bright fringes, or **constructive interference**, at point P is

Condition for constructive interference ▶

$$d \sin \theta_{\text{bright}} = m\lambda \quad m = 0, \pm 1, \pm 2, \dots \quad (37.2)$$

The number m is called the **order number**. For constructive interference, the order number is the same as the number of wavelengths that represents the path difference between the waves from the two slits. The central bright fringe at $\theta_{\text{bright}} = 0$ is called the *zeroth-order maximum*. The first maximum on either side, where $m = \pm 1$, is called the *first-order maximum*, and so forth.

When δ is an odd multiple of $\lambda/2$, the two waves arriving at point P are 180° out of phase and give rise to destructive interference. Therefore, the condition for dark fringes, or **destructive interference**, at point P is

Condition for destructive interference ▶

$$d \sin \theta_{\text{dark}} = (m + \frac{1}{2})\lambda \quad m = 0, \pm 1, \pm 2, \dots \quad (37.3)$$

These equations provide the *angular* positions of the fringes. It is also useful to obtain expressions for the *linear* positions measured along the screen from O to P . From the triangle OPQ in Figure 37.5a, we see that

$$\tan \theta = \frac{y}{L} \quad (37.4)$$

Using this result, the linear positions of bright and dark fringes are given by

$$y_{\text{bright}} = L \tan \theta_{\text{bright}} \quad (37.5)$$

$$y_{\text{dark}} = L \tan \theta_{\text{dark}} \quad (37.6)$$

where θ_{bright} and θ_{dark} are given by Equations 37.2 and 37.3.

When the angles to the fringes are small, the positions of the fringes are linear near the center of the pattern. That can be verified by noting that for small angles, $\tan \theta \approx \sin \theta$, so Equation 37.5 gives the positions of the bright fringes as $y_{\text{bright}} = L \sin \theta_{\text{bright}}$. Incorporating Equation 37.2 gives

$$y_{\text{bright}} = L \frac{m\lambda}{d} \quad (\text{small angles}) \quad (37.7)$$

This result shows that y_{bright} is linear in the order number m , so the fringes are equally spaced for small angles. Similarly, for dark fringes,

$$y_{\text{dark}} = L \frac{(m + \frac{1}{2})\lambda}{d} \quad (\text{small angles}) \quad (37.8)$$

As demonstrated in Example 37.1, Young's double-slit experiment provides a method for measuring the wavelength of light. In fact, Young used this technique to do precisely that. In addition, his experiment gave the wave model of light a great deal of credibility. It was inconceivable that particles of light coming through the slits could cancel one another in a way that would explain the dark fringes.

The principles discussed in this section are the basis of the **waves in interference** analysis model. This model was applied to mechanical waves in one dimension in Chapter 18. Here we see the details of applying this model in three dimensions to light.

- Quick Quiz 37.1** Which of the following causes the fringes in a two-slit interference pattern to move farther apart? (a) decreasing the wavelength of the light (b) decreasing the screen distance L (c) decreasing the slit spacing d (d) immersing the entire apparatus in water

Analysis Model Waves in Interference

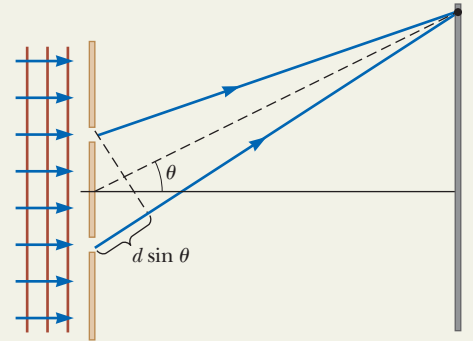
Imagine a broad beam of light that illuminates a double slit in an otherwise opaque material. An interference pattern of bright and dark fringes is created on a distant screen. The condition for bright fringes (**constructive interference**) is

$$d \sin \theta_{\text{bright}} = m\lambda \quad m = 0, \pm 1, \pm 2, \dots \quad (37.2)$$

The condition for dark fringes (**destructive interference**) is

$$d \sin \theta_{\text{dark}} = \left(m + \frac{1}{2}\right)\lambda \quad m = 0, \pm 1, \pm 2, \dots \quad (37.3)$$

The number m is called the **order number** of the fringe.



Examples:

- a thin film of oil on top of water shows swirls of color (Section 37.5)
- x-rays passing through a crystalline solid combine to form a Laue pattern (Chapter 38)
- a Michelson interferometer (Section 37.6) is used to search for the ether representing the medium through which light travels (Chapter 39)
- electrons exhibit interference just like light waves when they pass through a double slit (Chapter 40)

Example 37.1

Measuring the Wavelength of a Light Source

AM

A viewing screen is separated from a double slit by 4.80 m. The distance between the two slits is 0.030 0 mm. Monochromatic light is directed toward the double slit and forms an interference pattern on the screen. The first dark fringe is 4.50 cm from the center line on the screen.

(A) Determine the wavelength of the light.

SOLUTION

Conceptualize Study Figure 37.5 to be sure you understand the phenomenon of interference of light waves. The distance of 4.50 cm is y in Figure 37.5. Because $L \gg y$, the angles for the fringes are small.

Categorize This problem is a simple application of the *waves in interference* model.

Analyze

Solve Equation 37.8 for the wavelength and substitute numerical values, taking $m = 0$ for the first dark fringe:

$$\begin{aligned} \lambda &= \frac{y_{\text{dark}} d}{\left(m + \frac{1}{2}\right)L} = \frac{(4.50 \times 10^{-2} \text{ m})(3.00 \times 10^{-5} \text{ m})}{\left(0 + \frac{1}{2}\right)(4.80 \text{ m})} \\ &= 5.62 \times 10^{-7} \text{ m} = \mathbf{562 \text{ nm}} \end{aligned}$$

(B) Calculate the distance between adjacent bright fringes.

SOLUTION

Find the distance between adjacent bright fringes from Equation 37.7 and the results of part (A):

$$\begin{aligned} y_{m+1} - y_m &= L \frac{(m+1)\lambda}{d} - L \frac{m\lambda}{d} \\ &= L \frac{\lambda}{d} = 4.80 \text{ m} \left(\frac{5.62 \times 10^{-7} \text{ m}}{3.00 \times 10^{-5} \text{ m}} \right) \\ &= 9.00 \times 10^{-2} \text{ m} = \mathbf{9.00 \text{ cm}} \end{aligned}$$

Finalize For practice, find the wavelength of the sound in Example 18.1 using the procedure in part (A) of this example.

Example 37.2

Separating Double-Slit Fringes of Two Wavelengths

AM

A light source emits visible light of two wavelengths: $\lambda = 430$ nm and $\lambda' = 510$ nm. The source is used in a double-slit interference experiment in which $L = 1.50$ m and $d = 0.0250$ mm. Find the separation distance between the third-order bright fringes for the two wavelengths.

SOLUTION

Conceptualize In Figure 37.5a, imagine light of two wavelengths incident on the slits and forming two interference patterns on the screen. At some points, the fringes of the two colors might overlap, but at most points, they will not.

Categorize This problem is an application of the mathematical representation of the *waves in interference* analysis model.

Analyze

Use Equation 37.7 to find the fringe positions corresponding to these two wavelengths and subtract them:

$$\Delta y = y'_{\text{bright}} - y_{\text{bright}} = L \frac{m\lambda'}{d} - L \frac{m\lambda}{d} = \frac{Lm}{d}(\lambda' - \lambda)$$

Substitute numerical values:

$$\begin{aligned} \Delta y &= \frac{(1.50 \text{ m})(3)}{0.0250 \times 10^{-3} \text{ m}}(510 \times 10^{-9} \text{ m} - 430 \times 10^{-9} \text{ m}) \\ &= 0.0144 \text{ m} = 1.44 \text{ cm} \end{aligned}$$

Finalize Let's explore further details of the interference pattern in the following **What If?**

WHAT IF? What if we examine the entire interference pattern due to the two wavelengths and look for overlapping fringes? Are there any locations on the screen where the bright fringes from the two wavelengths overlap exactly?

Answer Find such a location by setting the location of any bright fringe due to λ equal to one due to λ' , using Equation 37.7:

$$L \frac{m\lambda}{d} = L \frac{m'\lambda'}{d} \rightarrow \frac{m'}{m} = \frac{\lambda}{\lambda'}$$

Substitute the wavelengths:

$$\frac{m'}{m} = \frac{430 \text{ nm}}{510 \text{ nm}} = \frac{43}{51}$$

Therefore, the 51st fringe of the 430-nm light overlaps with the 43rd fringe of the 510-nm light.

Use Equation 37.7 to find the value of y for these fringes:

$$y = (1.50 \text{ m}) \left[\frac{51(430 \times 10^{-9} \text{ m})}{0.0250 \times 10^{-3} \text{ m}} \right] = 1.32 \text{ m}$$

This value of y is comparable to L , so the small-angle approximation used for Equation 37.7 is *not* valid. This conclusion suggests we should not expect Equation 37.7 to give us the correct result. If you use Equation 37.5, you can show that the bright fringes do indeed overlap when the same condition, $m'/m = \lambda/\lambda'$, is met (see Problem 48). Therefore, the 51st fringe of the 430-nm light does overlap with the 43rd fringe of the 510-nm light, but not at the location of 1.32 m. You are asked to find the correct location as part of Problem 48.

37.3 Intensity Distribution of the Double-Slit Interference Pattern

Notice that the edges of the bright fringes in Figure 37.1b are not sharp; rather, there is a gradual change from bright to dark. So far, we have discussed the locations of only the centers of the bright and dark fringes on a distant screen. Let's now direct our attention to the intensity of the light at other points between the positions of maximum constructive and destructive interference. In other words, we now calculate the distribution of light intensity associated with the double-slit interference pattern.

Again, suppose the two slits represent coherent sources of sinusoidal waves such that the two waves from the slits have the same angular frequency ω and are in

phase. The total magnitude of the electric field at point P on the screen in Figure 37.5 is the superposition of the two waves. Assuming the two waves have the same amplitude E_0 , we can write the magnitude of the electric field at point P due to each wave separately as

$$E_1 = E_0 \sin \omega t \quad \text{and} \quad E_2 = E_0 \sin (\omega t + \phi) \quad (37.9)$$

Although the waves are in phase at the slits, their phase difference ϕ at P depends on the path difference $\delta = r_2 - r_1 = d \sin \theta$. A path difference of λ (for constructive interference) corresponds to a phase difference of 2π rad. A path difference of δ is the same fraction of λ as the phase difference ϕ is of 2π . We can describe this fraction mathematically with the ratio

$$\frac{\delta}{\lambda} = \frac{\phi}{2\pi}$$

which gives

$$\phi = \frac{2\pi}{\lambda} \delta = \frac{2\pi}{\lambda} d \sin \theta \quad (37.10) \quad \leftarrow \text{Phase difference}$$

This equation shows how the phase difference ϕ depends on the angle θ in Figure 37.5.

Using the superposition principle and Equation 37.9, we obtain the following expression for the magnitude of the resultant electric field at point P :

$$E_P = E_1 + E_2 = E_0 [\sin \omega t + \sin (\omega t + \phi)] \quad (37.11)$$

We can simplify this expression by using the trigonometric identity

$$\sin A + \sin B = 2 \sin \left(\frac{A+B}{2} \right) \cos \left(\frac{A-B}{2} \right)$$

Taking $A = \omega t + \phi$ and $B = \omega t$, Equation 37.11 becomes

$$E_P = 2E_0 \cos \left(\frac{\phi}{2} \right) \sin \left(\omega t + \frac{\phi}{2} \right) \quad (37.12)$$

This result indicates that the electric field at point P has the same frequency ω as the light at the slits but that the amplitude of the field is multiplied by the factor $2 \cos(\phi/2)$. To check the consistency of this result, note that if $\phi = 0, 2\pi, 4\pi, \dots$, the magnitude of the electric field at point P is $2E_0$, corresponding to the condition for maximum constructive interference. These values of ϕ are consistent with Equation 37.2 for constructive interference. Likewise, if $\phi = \pi, 3\pi, 5\pi, \dots$, the magnitude of the electric field at point P is zero, which is consistent with Equation 37.3 for total destructive interference.

Finally, to obtain an expression for the light intensity at point P , recall from Section 34.4 that the intensity of a wave is proportional to the square of the resultant electric field magnitude at that point (Eq. 34.24). Using Equation 37.12, we can therefore express the light intensity at point P as

$$I \propto E_P^2 = 4E_0^2 \cos^2 \left(\frac{\phi}{2} \right) \sin^2 \left(\omega t + \frac{\phi}{2} \right)$$

Most light-detecting instruments measure time-averaged light intensity, and the time-averaged value of $\sin^2(\omega t + \phi/2)$ over one cycle is $\frac{1}{2}$. (See Fig. 33.5.) Therefore, we can write the average light intensity at point P as

$$I = I_{\max} \cos^2 \left(\frac{\phi}{2} \right) \quad (37.13)$$

where I_{\max} is the maximum intensity on the screen and the expression represents the time average. Substituting the value for ϕ given by Equation 37.10 into this expression gives

$$I = I_{\max} \cos^2 \left(\frac{\pi d \sin \theta}{\lambda} \right) \quad (37.14)$$

Alternatively, because $\sin \theta \approx y/L$ for small values of θ in Figure 37.5, we can write Equation 37.14 in the form

$$I = I_{\max} \cos^2 \left(\frac{\pi d}{\lambda L} y \right) \quad (\text{small angles}) \quad (37.15)$$

Constructive interference, which produces light intensity maxima, occurs when the quantity $\pi dy/\lambda L$ is an integral multiple of π , corresponding to $y = (\lambda L/d)m$, where m is the order number. This result is consistent with Equation 37.7.

A plot of light intensity versus $d \sin \theta$ is given in Figure 37.6. The interference pattern consists of equally spaced fringes of equal intensity.

Figure 37.7 shows similar plots of light intensity versus $d \sin \theta$ for light passing through multiple slits. For more than two slits, we would add together more electric field magnitudes than the two in Equation 37.9. In this case, the pattern contains primary and secondary maxima. For three slits, notice that the primary maxima are nine times more intense than the secondary maxima as measured by the height of the curve because the intensity varies as E^2 . For N slits, the intensity of the primary maxima is N^2 times greater than that for the secondary maxima. As the number of slits increases, the primary maxima increase in intensity and become narrower, while the secondary maxima decrease in intensity relative to the primary maxima. Figure 37.7 also shows that as the number of slits increases, the number of secondary maxima also increases. In fact, the number of secondary maxima is always $N - 2$, where N is the number of slits. In Section 38.4, we shall investigate the pattern for a very large number of slits in a device called a *diffraction grating*.

Quick Quiz 37.2 Using Figure 37.7 as a model, sketch the interference pattern from six slits.

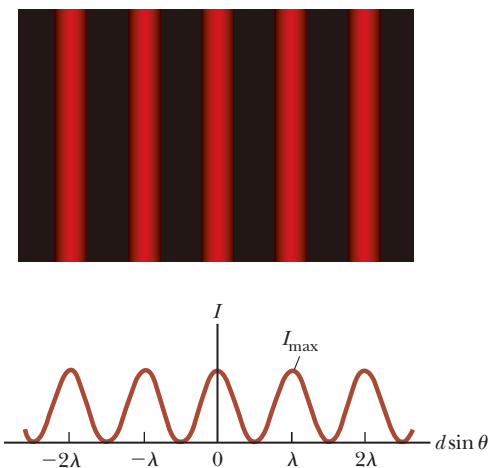


Figure 37.6 Light intensity versus $d \sin \theta$ for a double-slit interference pattern when the screen is far from the two slits ($L \gg d$).

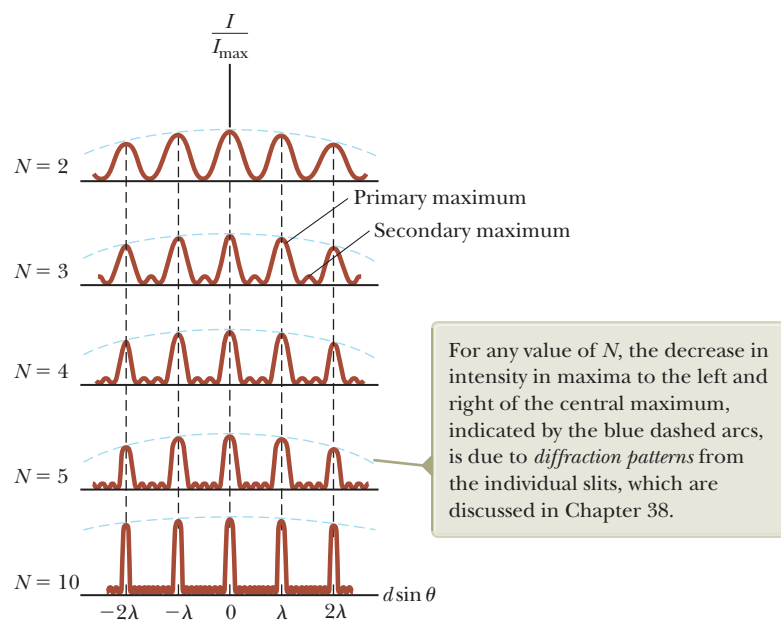


Figure 37.7 Multiple-slit interference patterns. As N , the number of slits, is increased, the primary maxima (the tallest peaks in each graph) become narrower but remain fixed in position and the number of secondary maxima increases.

37.4 Change of Phase Due to Reflection

Young's method for producing two coherent light sources involves illuminating a pair of slits with a single source. Another simple, yet ingenious, arrangement for producing an interference pattern with a single light source is known as *Lloyd's mirror*¹ (Fig. 37.8). A point light source S is placed close to a mirror, and a viewing screen is positioned some distance away and perpendicular to the mirror. Light waves can reach point P on the screen either directly from S to P or by the path involving reflection from the mirror. The reflected ray can be treated as a ray originating from a virtual source S' . As a result, we can think of this arrangement as a double-slit source where the distance d between sources S and S' in Figure 37.8 is analogous to length d in Figure 37.5. Hence, at observation points far from the source ($L \gg d$), we expect waves from S and S' to form an interference pattern exactly like the one formed by two real coherent sources. An interference pattern is indeed observed. The positions of the dark and bright fringes, however, are reversed relative to the pattern created by two real coherent sources (Young's experiment). Such a reversal can only occur if the coherent sources S and S' differ in phase by 180° .

To illustrate further, consider point P' , the point where the mirror intersects the screen. This point is equidistant from sources S and S' . If path difference alone were responsible for the phase difference, we would see a bright fringe at P' (because the path difference is zero for this point), corresponding to the central bright fringe of the two-slit interference pattern. Instead, a dark fringe is observed at P' . We therefore conclude that a 180° phase change must be produced by reflection from the mirror. In general, an electromagnetic wave undergoes a phase change of 180° upon reflection from a medium that has a higher index of refraction than the one in which the wave is traveling.

It is useful to draw an analogy between reflected light waves and the reflections of a transverse pulse on a stretched string (Section 16.4). The reflected pulse on a string undergoes a phase change of 180° when reflected from the boundary of a denser string or a rigid support, but no phase change occurs when the pulse is reflected from the boundary of a less dense string or a freely-supported end. Similarly, an electromagnetic wave undergoes a 180° phase change when reflected from a boundary leading to an optically denser medium (defined as a medium with a higher index of refraction), but no phase change occurs when the wave is reflected from a boundary leading to a less dense medium. These rules, summarized in Figure 37.9, can be deduced from Maxwell's equations, but the treatment is beyond the scope of this text.

An interference pattern is produced on the screen as a result of the combination of the direct ray (red) and the reflected ray (blue).

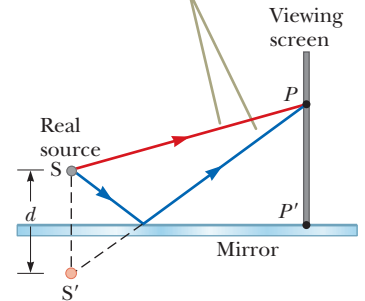


Figure 37.8 Lloyd's mirror. The reflected ray undergoes a phase change of 180° .

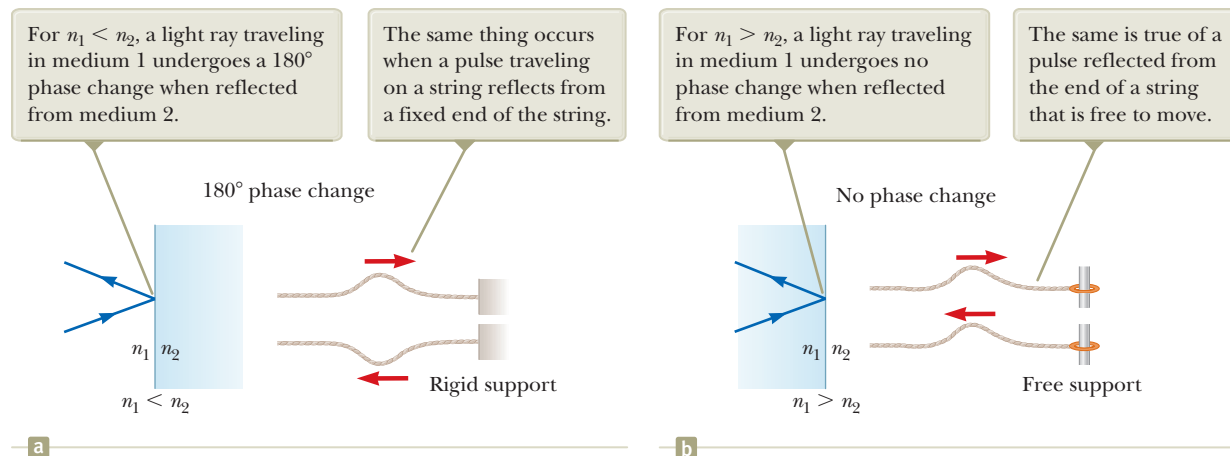


Figure 37.9 Comparisons of reflections of light waves and waves on strings.

¹Developed in 1834 by Humphrey Lloyd (1800–1881), Professor of Natural and Experimental Philosophy, Trinity College, Dublin.

37.5 Interference in Thin Films

Interference effects are commonly observed in thin films, such as thin layers of oil on water or the thin surface of a soap bubble. The varied colors observed when white light is incident on such films result from the interference of waves reflected from the two surfaces of the film.

Consider a film of uniform thickness t and index of refraction n . The wavelength of light λ_n in the film (see Section 35.5) is

$$\lambda_n = \frac{\lambda}{n}$$

where λ is the wavelength of the light in free space and n is the index of refraction of the film material. Let's assume light rays traveling in air are nearly normal to the two surfaces of the film as shown in Figure 37.10.

Reflected ray 1, which is reflected from the upper surface (A) in Figure 37.10, undergoes a phase change of 180° with respect to the incident wave. Reflected ray 2, which is reflected from the lower film surface (B), undergoes no phase change because it is reflected from a medium (air) that has a lower index of refraction. Therefore, ray 1 is 180° out of phase with ray 2, which is equivalent to a path difference of $\lambda_n/2$. We must also consider, however, that ray 2 travels an extra distance $2t$ before the waves recombine in the air above surface A . (Remember that we are considering light rays that are close to normal to the surface. If the rays are not close to normal, the path difference is larger than $2t$.) If $2t = \lambda_n/2$, rays 1 and 2 recombine in phase and the result is constructive interference. In general, the condition for *constructive* interference in thin films is²

$$2t = \left(m + \frac{1}{2}\right)\lambda_n \quad m = 0, 1, 2, \dots \quad (37.16)$$

This condition takes into account two factors: (1) the difference in path length for the two rays (the term $m\lambda_n$) and (2) the 180° phase change upon reflection (the term $\frac{1}{2}\lambda_n$). Because $\lambda_n = \lambda/n$, we can write Equation 37.16 as

$$2nt = \left(m + \frac{1}{2}\right)\lambda \quad m = 0, 1, 2, \dots \quad (37.17)$$

If the extra distance $2t$ traveled by ray 2 corresponds to a multiple of λ_n , the two waves combine out of phase and the result is destructive interference. The general equation for *destructive* interference in thin films is

$$2nt = m\lambda \quad m = 0, 1, 2, \dots \quad (37.18)$$

The foregoing conditions for constructive and destructive interference are valid when the medium above the top surface of the film is the same as the medium below the bottom surface or, if there are different media above and below the film, the index of refraction of both is less than n . If the film is placed between two different media, one with $n < n_{\text{film}}$ and the other with $n > n_{\text{film}}$, the conditions for constructive and destructive interference are reversed. In that case, either there is a phase change of 180° for both ray 1 reflecting from surface A and ray 2 reflecting from surface B or there is no phase change for either ray; hence, the net change in relative phase due to the reflections is zero.

Rays 3 and 4 in Figure 37.10 lead to interference effects in the light transmitted through the thin film. The analysis of these effects is similar to that of the reflected light. You are asked to explore the transmitted light in Problems 35, 36, and 38.

- Quick Quiz 37.3** One microscope slide is placed on top of another with their left edges in contact and a human hair under the right edge of the upper slide. As a result, a wedge of air exists between the slides. An interference pattern results when monochromatic light is incident on the wedge. What is at the left edges of the slides? (a) a dark fringe (b) a bright fringe (c) impossible to determine

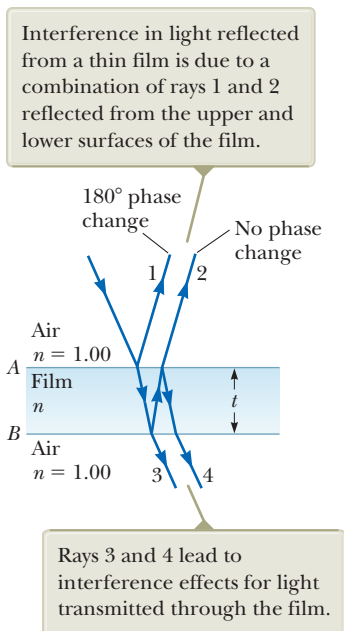


Figure 37.10 Light paths through a thin film.

Pitfall Prevention 37.1

Be Careful with Thin Films Be sure to include *both* effects—path length and phase change—when analyzing an interference pattern resulting from a thin film. The possible phase change is a new feature we did not need to consider for double-slit interference. Also think carefully about the material on either side of the film. If there are different materials on either side of the film, you may have a situation in which there is a 180° phase change at *both* surfaces or at *neither* surface.

²The full interference effect in a thin film requires an analysis of an infinite number of reflections back and forth between the top and bottom surfaces of the film. We focus here only on a single reflection from the bottom of the film, which provides the largest contribution to the interference effect.

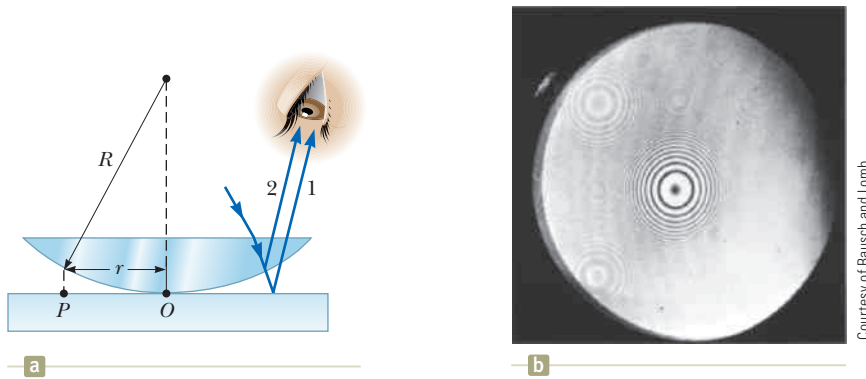


Figure 37.11 (a) The combination of rays reflected from the flat plate and the curved lens surface gives rise to an interference pattern known as Newton's rings. (b) Photograph of Newton's rings.

Newton's Rings

Another method for observing interference in light waves is to place a plano-convex lens on top of a flat glass surface as shown in Figure 37.11a. With this arrangement, the air film between the glass surfaces varies in thickness from zero at the point of contact to some nonzero value at point P . If the radius of curvature R of the lens is much greater than the distance r and the system is viewed from above, a pattern of light and dark rings is observed as shown in Figure 37.11b. These circular fringes, discovered by Newton, are called **Newton's rings**.

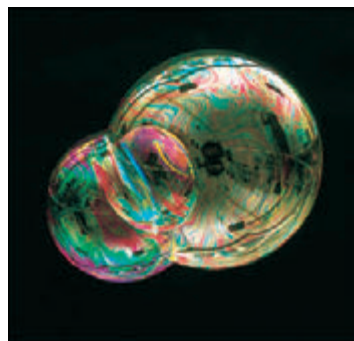
The interference effect is due to the combination of ray 1, reflected from the flat plate, with ray 2, reflected from the curved surface of the lens. Ray 1 undergoes a phase change of 180° upon reflection (because it is reflected from a medium of higher index of refraction), whereas ray 2 undergoes no phase change (because it is reflected from a medium of lower index of refraction). Hence, the conditions for constructive and destructive interference are given by Equations 37.17 and 37.18, respectively, with $n = 1$ because the film is air. Because there is no path difference and the total phase change is due only to the 180° phase change upon reflection, the contact point at O is dark as seen in Figure 37.11b.

Using the geometry shown in Figure 37.11a, we can obtain expressions for the radii of the bright and dark bands in terms of the radius of curvature R and wavelength λ . For example, the dark rings have radii given by the expression $r \approx \sqrt{m\lambda R/n}$. The details are left as a problem (see Problem 66). We can obtain the wavelength of the light causing the interference pattern by measuring the radii of the rings, provided R is known. Conversely, we can use a known wavelength to obtain R .

One important use of Newton's rings is in the testing of optical lenses. A circular pattern like that pictured in Figure 37.11b is obtained only when the lens is ground to a perfectly symmetric curvature. Variations from such symmetry produce a pattern with fringes that vary from a smooth, circular shape. These variations indicate how the lens must be reground and repolished to remove imperfections.



Peter Aprahamian/Photo Researchers, Inc.



Dr. Jeremy Burgess/Science Photo Library/Photo Researchers, Inc.

(a) A thin film of oil floating on water displays interference, shown by the pattern of colors when white light is incident on the film. Variations in film thickness produce the interesting color pattern. The razor blade gives you an idea of the size of the colored bands. (b) Interference in soap bubbles. The colors are due to interference between light rays reflected from the inner and outer surfaces of the thin film of soap making up the bubble. The color depends on the thickness of the film, ranging from black, where the film is thinnest, to magenta, where it is thickest.

Problem-Solving Strategy Thin-Film Interference

The following features should be kept in mind when working thin-film interference problems.

- 1. Conceptualize.** Think about what is going on physically in the problem. Identify the light source and the location of the observer.
- 2. Categorize.** Confirm that you should use the techniques for thin-film interference by identifying the thin film causing the interference.
- 3. Analyze.** The type of interference that occurs is determined by the phase relationship between the portion of the wave reflected at the upper surface of the film and the portion reflected at the lower surface. Phase differences between the two portions of the wave have two causes: differences in the distances traveled by the two portions and phase changes occurring on reflection. *Both* causes must be considered when determining which type of interference occurs. If the media above and below the film both have index of refraction larger than that of the film or if both indices are smaller, use Equation 37.17 for constructive interference and Equation 37.18 for destructive interference. If the film is located between two different media, one with $n < n_{\text{film}}$ and the other with $n > n_{\text{film}}$, reverse these two equations for constructive and destructive interference.
- 4. Finalize.** Inspect your final results to see if they make sense physically and are of an appropriate size.

Example 37.3 Interference in a Soap Film

Calculate the minimum thickness of a soap-bubble film that results in constructive interference in the reflected light if the film is illuminated with light whose wavelength in free space is $\lambda = 600$ nm. The index of refraction of the soap film is 1.33.

SOLUTION

Conceptualize Imagine that the film in Figure 37.10 is soap, with air on both sides.

Categorize We determine the result using an equation from this section, so we categorize this example as a substitution problem.

The minimum film thickness for constructive interference in the reflected light corresponds to $m = 0$ in Equation 37.17. Solve this equation for t and substitute numerical values:

$$t = \frac{(0 + \frac{1}{2})\lambda}{2n} = \frac{\lambda}{4n} = \frac{(600 \text{ nm})}{4(1.33)} = 113 \text{ nm}$$

WHAT IF? What if the film is twice as thick? Does this situation produce constructive interference?

Answer Using Equation 37.17, we can solve for the thicknesses at which constructive interference occurs:

$$t = (m + \frac{1}{2})\frac{\lambda}{2n} = (2m + 1)\frac{\lambda}{4n} \quad m = 0, 1, 2, \dots$$

The allowed values of m show that constructive interference occurs for *odd* multiples of the thickness corresponding to $m = 0$, $t = 113$ nm. Therefore, constructive interference does *not* occur for a film that is twice as thick.

Example 37.4 Nonreflective Coatings for Solar Cells

Solar cells—devices that generate electricity when exposed to sunlight—are often coated with a transparent, thin film of silicon monoxide (SiO , $n = 1.45$) to minimize reflective losses from the surface. Suppose a silicon solar cell ($n = 3.5$) is coated with a thin film of silicon monoxide for this purpose (Fig. 37.12a). Determine the minimum film thickness that produces the least reflection at a wavelength of 550 nm, near the center of the visible spectrum.

37.4 continued

SOLUTION

Conceptualize Figure 37.12a helps us visualize the path of the rays in the SiO film that result in interference in the reflected light.

Categorize Based on the geometry of the SiO layer, we categorize this example as a thin-film interference problem.

Analyze The reflected light is a minimum when rays 1 and 2 in Figure 37.12a meet the condition of destructive interference. In this situation, *both* rays undergo a 180° phase change upon reflection: ray 1 from the upper SiO surface and ray 2 from the lower SiO surface. The net change in phase due to reflection is therefore zero, and the condition for a reflection minimum requires a path difference of $\lambda_n/2$, where λ_n is the wavelength of the light in SiO. Hence, $2nt = \lambda/2$, where λ is the wavelength in air and n is the index of refraction of SiO.

Solve the equation $2nt = \lambda/2$ for t and substitute numerical values:

$$t = \frac{\lambda}{4n} = \frac{550 \text{ nm}}{4(1.45)} = 94.8 \text{ nm}$$

Finalize A typical uncoated solar cell has reflective losses as high as 30%, but a coating of SiO can reduce this value to about 10%. This significant decrease in reflective losses increases the cell's efficiency because less reflection means that more sunlight enters the silicon to create charge carriers in the cell. No coating can ever be made perfectly nonreflecting because the required thickness is wavelength-dependent and the incident light covers a wide range of wavelengths.

Glass lenses used in cameras and other optical instruments are usually coated with a transparent thin film to reduce or eliminate unwanted reflection and to enhance the transmission of light through the lenses. The camera lens in Figure 37.12b has several coatings (of different thicknesses) to minimize reflection of light waves having wavelengths near the center of the visible spectrum. As a result, the small amount of light that is reflected by the lens has a greater proportion of the far ends of the spectrum and often appears reddish violet.

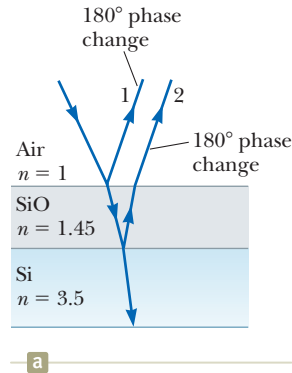


Figure 37.12 (Example 37.4) (a) Reflective losses from a silicon solar cell are minimized by coating the surface of the cell with a thin film of silicon monoxide. (b) The reflected light from a coated camera lens often has a reddish-violet appearance.

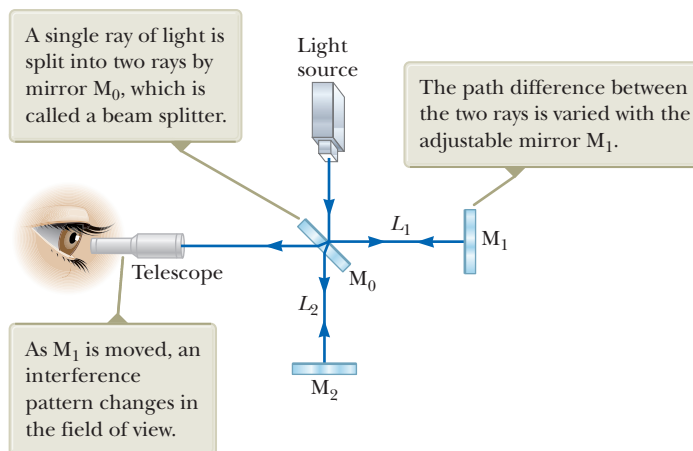
37.6 The Michelson Interferometer

The **interferometer**, invented by American physicist A. A. Michelson (1852–1931), splits a light beam into two parts and then recombines the parts to form an interference pattern. The device can be used to measure wavelengths or other lengths with great precision because a large and precisely measurable displacement of one of the mirrors is related to an exactly countable number of wavelengths of light.

A schematic diagram of the interferometer is shown in Figure 37.13 (page 1148). A ray of light from a monochromatic source is split into two rays by mirror M_0 , which is inclined at 45° to the incident light beam. Mirror M_0 , called a *beam splitter*, transmits half the light incident on it and reflects the rest. One ray is reflected from M_0 to the right toward mirror M_1 , and the second ray is transmitted vertically through M_0 toward mirror M_2 . Hence, the two rays travel separate paths L_1 and L_2 . After reflecting from M_1 and M_2 , the two rays eventually recombine at M_0 to produce an interference pattern, which can be viewed through a telescope.

The interference condition for the two rays is determined by the difference in their path length. When the two mirrors are exactly perpendicular to each other, the interference pattern is a target pattern of bright and dark circular fringes. As M_1 is moved, the fringe pattern collapses or expands, depending on the direction in which M_1 is moved. For example, if a dark circle appears at the center of the

Figure 37.13 Diagram of the Michelson interferometer.



target pattern (corresponding to destructive interference) and M_1 is then moved a distance $\lambda/4$ toward M_0 , the path difference changes by $\lambda/2$. What was a dark circle at the center now becomes a bright circle. As M_1 is moved an additional distance $\lambda/4$ toward M_0 , the bright circle becomes a dark circle again. Therefore, the fringe pattern shifts by one-half fringe each time M_1 is moved a distance $\lambda/4$. The wavelength of light is then measured by counting the number of fringe shifts for a given displacement of M_1 . If the wavelength is accurately known, mirror displacements can be measured to within a fraction of the wavelength.

We will see an important historical use of the Michelson interferometer in our discussion of relativity in Chapter 39. Modern uses include the following two applications, Fourier transform infrared spectroscopy and the laser interferometer gravitational-wave observatory.


Fourier Transform Infrared Spectroscopy

Spectroscopy is the study of the wavelength distribution of radiation from a sample that can be used to identify the characteristics of atoms or molecules in the sample. Infrared spectroscopy is particularly important to organic chemists when analyzing organic molecules. Traditional spectroscopy involves the use of an optical element, such as a prism (Section 35.5) or a diffraction grating (Section 38.4), which spreads out various wavelengths in a complex optical signal from the sample into different angles. In this way, the various wavelengths of radiation and their intensities in the signal can be determined. These types of devices are limited in their resolution and effectiveness because they must be scanned through the various angular deviations of the radiation.

The technique of *Fourier transform infrared (FTIR) spectroscopy* is used to create a higher-resolution spectrum in a time interval of 1 second that may have required 30 minutes with a standard spectrometer. In this technique, the radiation from a sample enters a Michelson interferometer. The movable mirror is swept through the zero-path-difference condition, and the intensity of radiation at the viewing position is recorded. The result is a complex set of data relating light intensity as a function of mirror position, called an *interferogram*. Because there is a relationship between mirror position and light intensity for a given wavelength, the interferogram contains information about all wavelengths in the signal.

In Section 18.8, we discussed Fourier analysis of a waveform. The waveform is a function that contains information about all the individual frequency components that make up the waveform.³ Equation 18.13 shows how the waveform is generated from the individual frequency components. Similarly, the interferogram can be

³In acoustics, it is common to talk about the components of a complex signal in terms of frequency. In optics, it is more common to identify the components by wavelength.



LIGO Hanford Observatory

Figure 37.14 The Laser Interferometer Gravitational-Wave Observatory (LIGO) near Richland, Washington. Notice the two perpendicular arms of the Michelson interferometer.

analyzed by computer, in a process called a *Fourier transform*, to provide all the wavelength components. This information is the same as that generated by traditional spectroscopy, but the resolution of FTIR spectroscopy is much higher.

Laser Interferometer Gravitational-Wave Observatory

Einstein's general theory of relativity (Section 39.9) predicts the existence of *gravitational waves*. These waves propagate from the site of any gravitational disturbance, which could be periodic and predictable, such as the rotation of a double star around a center of mass, or unpredictable, such as the supernova explosion of a massive star.

In Einstein's theory, gravitation is equivalent to a distortion of space. Therefore, a gravitational disturbance causes an additional distortion that propagates through space in a manner similar to mechanical or electromagnetic waves. When gravitational waves from a disturbance pass by the Earth, they create a distortion of the local space. The laser interferometer gravitational-wave observatory (LIGO) apparatus is designed to detect this distortion. The apparatus employs a Michelson interferometer that uses laser beams with an effective path length of several kilometers. At the end of an arm of the interferometer, a mirror is mounted on a massive pendulum. When a gravitational wave passes by, the pendulum and the attached mirror move and the interference pattern due to the laser beams from the two arms changes.

Two sites for interferometers have been developed in the United States—in Richland, Washington, and in Livingston, Louisiana—to allow coincidence studies of gravitational waves. Figure 37.14 shows the Washington site. The two arms of the Michelson interferometer are evident in the photograph. Six data runs have been performed as of 2010. These runs have been coordinated with other gravitational wave detectors, such as GEO in Hannover, Germany, TAMA in Mitaka, Japan, and VIRGO in Cascina, Italy. So far, gravitational waves have not yet been detected, but the data runs have provided critical information for modifications and design features for the next generation of detectors. The original detectors are currently being dismantled, in preparation for the installation of Advanced LIGO, an upgrade that should increase the sensitivity of the observatory by a factor of 10. The target date for the beginning of scientific operation of Advanced LIGO is 2014.

Summary

Concepts and Principles

■ **Interference** in light waves occurs whenever two or more waves overlap at a given point. An interference pattern is observed if (1) the sources are coherent and (2) the sources have identical wavelengths.

■ The **intensity** at a point in a double-slit interference pattern is

$$I = I_{\max} \cos^2 \left(\frac{\pi d \sin \theta}{\lambda} \right) \quad (37.14)$$

where I_{\max} is the maximum intensity on the screen and the expression represents the time average.

continued

A wave traveling from a medium of index of refraction n_1 toward a medium of index of refraction n_2 undergoes a 180° phase change upon reflection when $n_2 > n_1$ and undergoes no phase change when $n_2 < n_1$.

The condition for constructive interference in a film of thickness t and index of refraction n surrounded by air is

$$2nt = m\lambda \quad m = 0, 1, 2, \dots \quad (37.17)$$

where λ is the wavelength of the light in free space.

Similarly, the condition for destructive interference in a thin film surrounded by air is

$$2nt = (m + \frac{1}{2})\lambda \quad m = 0, 1, 2, \dots \quad (37.18)$$

Analysis Models for Problem Solving

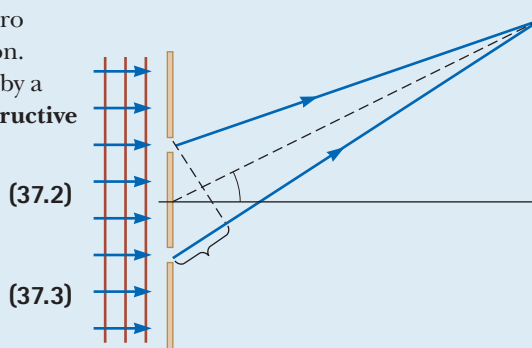
Waves in Interference. Young's double-slit experiment serves as a prototype for interference phenomena involving electromagnetic radiation. In this experiment, two slits separated by a distance d are illuminated by a single-wavelength light source. The condition for bright fringes (**constructive interference**)

$$d \sin \theta_{\text{bright}} = m\lambda \quad m = 0, 1, 2, \dots \quad (37.2)$$

The condition for dark fringes (**destructive interference**)

$$d \sin \theta_{\text{dark}} = (m + \frac{1}{2})\lambda \quad m = 0, 1, 2, \dots \quad (37.3)$$

The number m is called the **order number** of the fringe.



Objective Questions



- While using a Michelson interferometer (shown in Fig. 37.13), you see a dark circle at the center of the interference pattern. (i) As you gradually move the light source toward the central mirror M_1 , through a distance $\lambda/2$, what do you see? (a) There is no change in the pattern. (b) The dark circle changes into a bright circle. (c) The dark circle changes into a bright circle and then back into a dark circle. (d) The dark circle changes into a bright circle, then into a dark circle, and then into a bright circle. (ii) As you gradually move the moving mirror toward the central mirror M_1 , through a distance $\lambda/2$, what do you see? Choose from the same possibilities.
- Four trials of Young's double-slit experiment are conducted. (a) In the first trial, blue light passes through two fine slits 400 m apart and forms an interference pattern on a screen 4 m away. (b) In a second trial, red light passes through the same slits and falls on the same screen. (c) A third trial is performed with red light and the same screen, but with slits 800 m apart. (d) A final trial is performed with red light, slits 800 m apart, and a screen 8 m away. (i) Rank the trials (a) through (d) from the largest to the smallest value of the angle between the central maximum and the first-order side maximum. In your ranking, note any cases of equality. (ii) Rank the same trials according to the distance between the central maximum and the first-order side maximum on the screen.
 - Suppose Young's double-slit experiment is performed in air using red light and then the apparatus is immersed in water. What happens to the interference pattern on the screen? (a) It disappears. (b) The bright and dark fringes stay in the same locations, but the contrast is reduced. (c) The bright fringes are closer together. (d) The bright fringes are farther apart. (e) No change happens in the interference pattern.
 - Green light has a wavelength of 500 nm in air. (i) Assume green light is reflected from a mirror with angle of incidence 0° . The incident and reflected waves together constitute a standing wave with what distance from one node to the next node? (a) 1000 nm (b) 500 nm (c) 250 nm (d) 125 nm (e) 62.5 nm (ii) The green light is sent into a Michelson interferometer that is adjusted to produce a central bright circle. How far must the interferometer's moving mirror be shifted to change the center of the pattern into a dark circle? Choose from the same possibilities as in part (i). (iii) The green light is reflected perpendicularly from a thin film of a plastic with an index of refraction 2.00. The film appears bright in the reflected light. How much additional thickness would make the film appear dark?
 - A thin layer of oil ($n = 1.25$) is floating on water ($n = 1.33$). What is the minimum nonzero thickness of the oil in the region that strongly reflects green light ($\lambda = 530$ nm)? (a) 500 nm (b) 313 nm (c) 404 nm (d) 212 nm (e) 285 nm

6. A monochromatic beam of light of wavelength 500 nm illuminates a double slit having a slit separation of 2.00 m. What is the angle of the second-order bright fringe? (a) 0.050 0 rad (b) 0.025 0 rad (c) 0.100 rad (d) 0.250 rad (e) 0.010 0 rad
7. According to Table 35.1, the index of refraction of flint glass is 1.66 and the index of refraction of crown glass is 1.52. (i) A film formed by one drop of sassafras oil, on a horizontal surface of a flint glass block, is viewed by reflected light. The film appears brightest at its outer margin, where it is thinnest. A film of the same oil on crown glass appears dark at its outer margin. What can you say about the index of refraction of the oil? (a) It must be less than 1.52. (b) It must be between 1.52 and 1.66. (c) It must be greater than 1.66. (d) None of those statements is necessarily true. (ii) Could a very thin film of some other liquid appear bright by reflected light on both of the glass blocks? (iii) Could it appear dark on both? (iv) Could it appear dark on crown glass and bright on flint glass? Experiments described by Thomas Young suggested this question.
8. Suppose you perform Young's double-slit experiment with the slit separation slightly smaller than the wavelength of the light. As a screen, you use a large half-cylinder with its axis along the midline between the

slits. What interference pattern will you see on the interior surface of the cylinder? (a) bright and dark fringes so closely spaced as to be indistinguishable (b) one central bright fringe and two dark fringes only (c) a completely bright screen with no dark fringes (d) one central dark fringe and two bright fringes only (e) a completely dark screen with no bright fringes

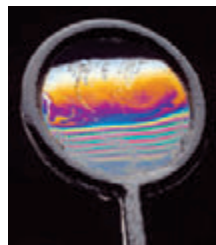
- A plane monochromatic light wave is incident on a double slit as illustrated in Figure 37.1. (i) As the viewing screen is moved away from the double slit, what happens to the separation between the interference fringes on the screen? (a) It increases. (b) It decreases. (c) It remains the same. (d) It may increase or decrease, depending on the wavelength of the light. (e) More information is required. (ii) As the slit separation increases, what happens to the separation between the interference fringes on the screen? Select from the same choices.
10. A film of oil on a puddle in a parking lot shows a variety of bright colors in swirled patches. What can you say about the thickness of the oil film? (a) It is much less than the wavelength of visible light. (b) It is on the same order of magnitude as the wavelength of visible light. (c) It is much greater than the wavelength of visible light. (d) It might have any relationship to the wavelength of visible light.

Conceptual Questions



Why is the lens on a good-quality camera coated with a thin film?

2. A soap film is held vertically in air and is viewed in reflected light as in Figure CQ37.2. Explain why the film appears to be dark at the top.
3. Explain why two flashlights held close together do not produce an interference pattern on a distant screen.



© Richard Megna/Fundamental Photographs, NYC

Figure CQ37.2

Conceptual Question 2 and Problem 70.

4. A lens with outer radius of curvature and index of refraction rests on a flat glass plate. The combination is illuminated with white light from above and observed from above. (a) Is there a dark spot or a light spot at the center of the lens? (b) What does it mean if the observed rings are noncircular?
5. Consider a dark fringe in a double-slit interference pattern at which almost no light energy is arriving. Light from both slits is arriving at the location of the dark fringe, but the waves cancel. Where does the energy at the positions of dark fringes go?

6. (a) In Young's double-slit experiment, why do we use monochromatic light? (b) If white light is used, how would the pattern change?
7. What is the necessary condition on the path length difference between two waves that interfere (a) constructively and (b) destructively?

8. In a laboratory accident, you spill two liquids onto different parts of a water surface. Neither of the liquids mixes with the water. Both liquids form thin films on the water surface. As the films spread and become very thin, you notice that one film becomes brighter and the other darker in reflected light. Why?
9. A theatrical smoke machine fills the space between the barrier and the viewing screen in the Young's double-slit experiment shown in Figure CQ37.9. Would the smoke show evidence of interference within this space? Explain your answer.

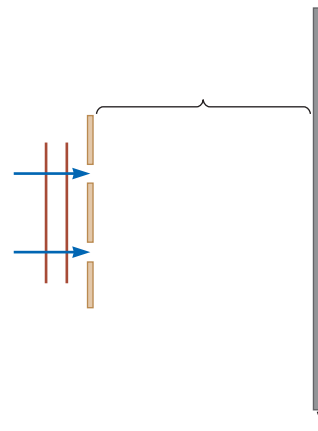


Figure CQ37.9

Problems

ENHANCED WebAssign The problems found in this chapter may be assigned online in Enhanced WebAssign

1. straightforward; 2. intermediate;
3. challenging

1. full solution available in the *Student Solutions Manual/Study Guide*

AMT Analysis Model tutorial available in Enhanced WebAssign

GP Guided Problem

M Master It tutorial available in Enhanced WebAssign

W Watch It video solution available in Enhanced WebAssign

Section 37.1 Young's Double-Slit Experiment

Section 37.2 Analysis Model: Waves in Interference

Problems 3, 5, 8, 10, and 13 in Chapter 18 can be assigned with this section.

- Two slits are separated by 0.320 mm. A beam of 500-nm light strikes the slits, producing an interference pattern. Determine the number of maxima observed in the angular range $-30.0^\circ < \theta < 30.0^\circ$.
- Light of wavelength 530 nm illuminates a pair of slits separated by 0.300 mm. If a screen is placed 2.00 m from the slits, determine the distance between the first and second dark fringes.
- A laser beam is incident on two slits with a separation of 0.200 mm, and a screen is placed 5.00 m from the slits. An interference pattern appears on the screen. If the angle from the center fringe to the first bright fringe to the side is 0.181° , what is the wavelength of the laser light?
- A Young's interference experiment is performed with **W** blue-green argon laser light. The separation between the slits is 0.500 mm, and the screen is located 3.30 m from the slits. The first bright fringe is located 3.40 mm from the center of the interference pattern. What is the wavelength of the argon laser light?
- W** Young's double-slit experiment is performed with 589-nm light and a distance of 2.00 m between the slits and the screen. The tenth interference minimum is observed 7.26 mm from the central maximum. Determine the spacing of the slits.
- Why is the following situation impossible?* Two narrow slits are separated by 8.00 mm in a piece of metal. A beam of microwaves strikes the metal perpendicularly, passes through the two slits, and then proceeds toward a wall some distance away. You know that the wavelength of the radiation is $1.00 \text{ cm} \pm 5\%$, but you wish to measure it more precisely. Moving a microwave detector along the wall to study the interference pattern, you measure the position of the $m = 1$ bright fringe, which leads to a successful measurement of the wavelength of the radiation.
- Light of wavelength 620 nm falls on a double slit, and the first bright fringe of the interference pattern is seen at an angle of 15.0° with the horizontal. Find the separation between the slits.
- In a Young's double-slit experiment, two parallel slits with a slit separation of 0.100 mm are illuminated by light of wavelength 589 nm, and the interference pattern is observed on a screen located 4.00 m from the slits. (a) What is the difference in path lengths from each of the slits to the location of the center of a third-order bright fringe on the screen? (b) What is the difference in path lengths from the two slits to the location of the center of the third dark fringe away from the center of the pattern?
- AMT** **M** A pair of narrow, parallel slits separated by 0.250 mm is illuminated by green light ($\lambda = 546.1 \text{ nm}$). The interference pattern is observed on a screen 1.20 m away from the plane of the parallel slits. Calculate the distance (a) from the central maximum to the first bright region on either side of the central maximum and (b) between the first and second dark bands in the interference pattern.
- Light with wavelength 442 nm passes through a double-slit system that has a slit separation $d = 0.400 \text{ mm}$. Determine how far away a screen must be placed so that dark fringes appear directly opposite both slits, with only one bright fringe between them.
- AMT** **M** The two speakers of a boom box are 35.0 cm apart. A single oscillator makes the speakers vibrate in phase at a frequency of 2.00 kHz. At what angles, measured from the perpendicular bisector of the line joining the speakers, would a distant observer hear maximum sound intensity? Minimum sound intensity? (Take the speed of sound as 340 m/s.)
- In a location where the speed of sound is 343 m/s, a 2 000-Hz sound wave impinges on two slits 30.0 cm apart. (a) At what angle is the first maximum of sound intensity located? (b) **What If?** If the sound wave is replaced by 3.00-cm microwaves, what slit separation gives the same angle for the first maximum of microwave intensity? (c) **What If?** If the slit separation is $1.00 \mu\text{m}$, what frequency of light gives the same angle to the first maximum of light intensity?
- AMT** **M** Two radio antennas separated by $d = 300 \text{ m}$ as shown in Figure P37.13 simultaneously broadcast identical signals at the same wavelength. A car travels due north along a straight line at position $x = 1\,000 \text{ m}$ from the center point between the antennas, and its radio receives the signals. (a) If the car is at the position of the second maximum after that at point O when it has

traveled a distance $y = 400$ m northward, what is the wavelength of the signals? (b) How much farther must the car travel from this position to encounter the next minimum in reception? *Note:* Do not use the small-angle approximation in this problem.

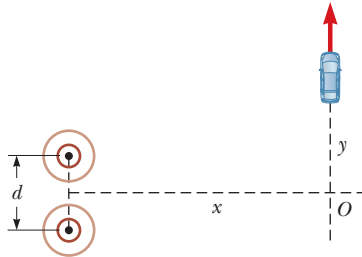


Figure P37.13

14. A riverside warehouse has several small doors facing the river. Two of these doors are open as shown in Figure P37.14. The walls of the warehouse are lined with sound-absorbing material. Two people stand at a distance $L = 150$ m from the wall with the open doors. Person A stands along a line passing through the midpoint between the open doors, and person B stands at a distance $y = 20$ m to his side. A boat on the river sounds its horn. To person A, the sound is loud and clear. To person B, the sound is barely audible. The principal wavelength of the sound waves is 3.00 m. Assuming person B is at the position of the first minimum, determine the distance d between the doors, center to center.

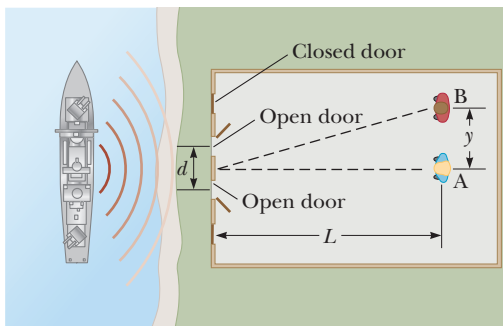


Figure P37.14

15. A student holds a laser that emits light of wavelength 632.8 nm. The laser beam passes through a pair of slits separated by 0.300 mm, in a glass plate attached to the front of the laser. The beam then falls perpendicularly on a screen, creating an interference pattern on it. The student begins to walk directly toward the screen at 3.00 m/s. The central maximum on the screen is stationary. Find the speed of the 50th-order maxima on the screen.
16. A student holds a laser that emits light of wavelength λ . The laser beam passes through a pair of slits separated by a distance d , in a glass plate attached to the front of the laser. The beam then falls perpendicularly on a screen, creating an interference pattern on it. The student begins to walk directly toward the screen at speed v . The central maximum on the screen is sta-

tionary. Find the speed of the m th-order maxima on the screen, where m can be very large.

17. Radio waves of wavelength 125 m from a galaxy reach a radio telescope by two separate paths as shown in Figure P37.17. One is a direct path to the receiver, which is situated on the edge of a tall cliff by the ocean, and the second is by reflection off the water. As the galaxy rises in the east over the water, the first minimum of destructive interference occurs when the galaxy is $\theta = 25.0^\circ$ above the horizon. Find the height of the radio telescope dish above the water.

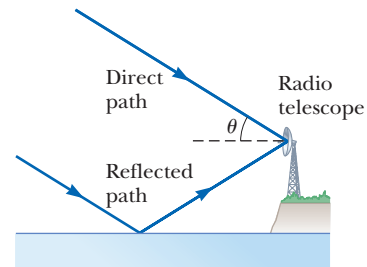


Figure P37.17 Problems 17 and 69.

18. In Figure P37.18 (not to scale), let $L = 1.20$ m and $d = 0.120$ mm and assume the slit system is illuminated with monochromatic 500 -nm light. Calculate the phase difference between the two wave fronts arriving at P when (a) $\theta = 0.500^\circ$ and (b) $y = 5.00$ mm. (c) What is the value of θ for which the phase difference is 0.333 rad? (d) What is the value of θ for which the path difference is $\lambda/4$?

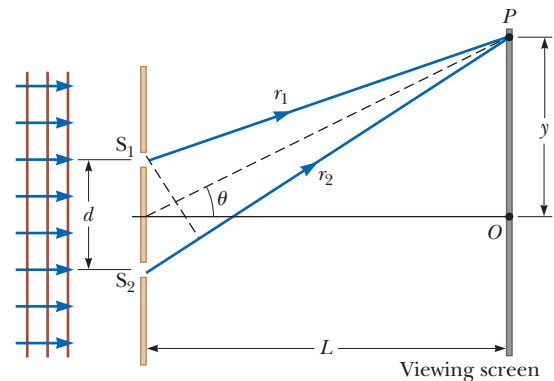


Figure P37.18 Problems 18 and 25.

19. Coherent light rays of wavelength λ strike a pair of slits separated by distance d at an angle θ_1 with respect to the normal to the plane containing the slits as shown in Figure P37.19. The rays leaving the slits make an

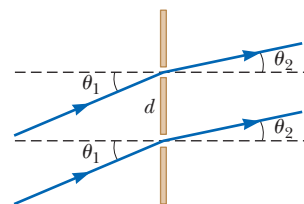


Figure P37.19

angle θ_2 with respect to the normal, and an interference maximum is formed by those rays on a screen that is a great distance from the slits. Show that the angle θ_2 is given by

$$\theta_2 = \sin^{-1} \left(\sin \theta_1 - \frac{m\lambda}{d} \right)$$

where m is an integer.

- 20. GP** Monochromatic light of wavelength λ is incident on a pair of slits separated by 2.40×10^{-4} m and forms an interference pattern on a screen placed 1.80 m from the slits. The first-order bright fringe is at a position $y_{\text{bright}} = 4.52$ mm measured from the center of the central maximum. From this information, we wish to predict where the fringe for $n = 50$ would be located. (a) Assuming the fringes are laid out linearly along the screen, find the position of the $n = 50$ fringe by multiplying the position of the $n = 1$ fringe by 50.0. (b) Find the tangent of the angle the first-order bright fringe makes with respect to the line extending from the point midway between the slits to the center of the central maximum. (c) Using the result of part (b) and Equation 37.2, calculate the wavelength of the light. (d) Compute the angle for the 50th-order bright fringe from Equation 37.2. (e) Find the position of the 50th-order bright fringe on the screen from Equation 37.5. (f) Comment on the agreement between the answers to parts (a) and (e).

- 21. W** In the double-slit arrangement of Figure P37.21, $d = 0.150$ mm, $L = 140$ cm, $\lambda = 643$ nm, and $y = 1.80$ cm. (a) What is the path difference δ for the rays from the two slits arriving at P ? (b) Express this path difference in terms of λ . (c) Does P correspond to a maximum, a minimum, or an intermediate condition? Give evidence for your answer.

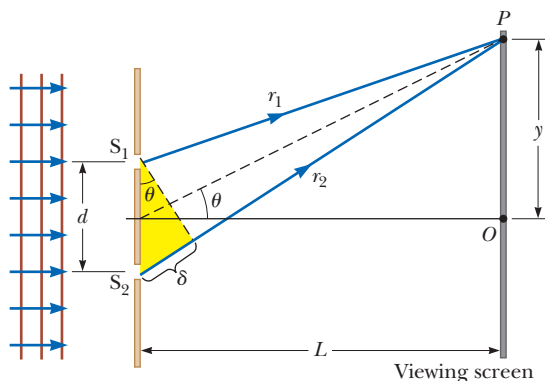


Figure P37.21

- 22.** Young's double-slit experiment underlies the *instrument landing system* used to guide aircraft to safe landings at some airports when the visibility is poor. Although real systems are more complicated than the example described here, they operate on the same principles. A pilot is trying to align her plane with a runway as suggested in Figure P37.22. Two radio antennas (the black dots in the figure) are positioned adjacent to the runway, separated by $d = 40.0$ m. The antennas broadcast unmodulated coherent radio waves at 30.0 MHz.

The red lines in Figure P37.22 represent paths along which maxima in the interference pattern of the radio waves exist. (a) Find the wavelength of the waves. The pilot "locks onto" the strong signal radiated along an interference maximum and steers the plane to keep the received signal strong. If she has found the central maximum,

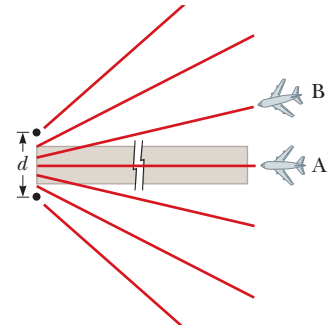


Figure P37.22

the plane will have precisely the correct heading to land when it reaches the runway as exhibited by plane A. (b) **What If?** Suppose the plane is flying along the first side maximum instead as is the case for plane B. How far to the side of the runway centerline will the plane be when it is 2.00 km from the antennas, measured along its direction of travel? (c) It is possible to tell the pilot that she is on the wrong maximum by sending out two signals from each antenna and equipping the aircraft with a two-channel receiver. The ratio of the two frequencies must not be the ratio of small integers (such as $\frac{3}{4}$). Explain how this two-frequency system would work and why it would not necessarily work if the frequencies were related by an integer ratio.

Section 37.3 Intensity Distribution of the Double-Slit Interference Pattern

- 23.** Two slits are separated by 0.180 mm. An interference pattern is formed on a screen 80.0 cm away by 656.3-nm light. Calculate the fraction of the maximum intensity a distance $y = 0.600$ cm away from the central maximum.
- 24.** Show that the two waves with wave functions given by $E_1 = 6.00 \sin(100\pi t)$ and $E_2 = 8.00 \sin(100\pi t + \pi/2)$ add to give a wave with the wave function $E_R \sin(100\pi t + \phi)$. Find the required values for E_R and ϕ .
- 25. M** In Figure P37.18, let $L = 120$ cm and $d = 0.250$ cm. The slits are illuminated with coherent 600-nm light. Calculate the distance y from the central maximum for which the average intensity on the screen is 75.0% of the maximum.
- 26.** Monochromatic coherent light of amplitude E_0 and angular frequency ω passes through three parallel slits, each separated by a distance d from its neighbor. (a) Show that the time-averaged intensity as a function of the angle θ is

$$I(\theta) = I_{\text{max}} \left[1 + 2 \cos \left(\frac{2\pi d \sin \theta}{\lambda} \right) \right]^2$$

- (b) Explain how this expression describes both the primary and the secondary maxima. (c) Determine the ratio of the intensities of the primary and secondary maxima.
- 27.** The intensity on the screen at a certain point in a double-slit interference pattern is 64.0% of the maximum value. (a) What minimum phase difference (in radians) between sources produces this result? (b) Express

this phase difference as a path difference for 486.1-nm light.

28. Green light ($\lambda = 546$ nm) illuminates a pair of narrow, parallel slits separated by 0.250 mm. Make a graph of I/I_{\max} as a function of θ for the interference pattern observed on a screen 1.20 m away from the plane of the parallel slits. Let θ range over the interval from -0.3° to $+0.3^\circ$.
29. Two narrow, parallel slits separated by 0.850 mm are illuminated by 600-nm light, and the viewing screen is 2.80 m away from the slits. (a) What is the phase difference between the two interfering waves on a screen at a point 2.50 mm from the central bright fringe? (b) What is the ratio of the intensity at this point to the intensity at the center of a bright fringe?

Section 37.4 Change of Phase Due to Reflection

Section 37.5 Interference in Thin Films

30. A soap bubble ($n = 1.33$) floating in air has the shape of a spherical shell with a wall thickness of 120 nm. (a) What is the wavelength of the visible light that is most strongly reflected? (b) Explain how a bubble of different thickness could also strongly reflect light of this same wavelength. (c) Find the two smallest film thicknesses larger than 120 nm that can produce strongly reflected light of the same wavelength.
31. A thin film of oil ($n = 1.25$) is located on smooth, wet pavement. When viewed perpendicular to the pavement, the film reflects most strongly red light at 640 nm and reflects no green light at 512 nm. How thick is the oil film?
32. A material having an index of refraction of 1.30 is used as an antireflective coating on a piece of glass ($n = 1.50$). What should the minimum thickness of this film be to minimize reflection of 500-nm light?
33. A possible means for making an airplane invisible to radar is to coat the plane with an antireflective polymer. If radar waves have a wavelength of 3.00 cm and the index of refraction of the polymer is $n = 1.50$, how thick would you make the coating?
34. A film of MgF_2 ($n = 1.38$) having thickness 1.00×10^{-5} cm is used to coat a camera lens. (a) What are the three longest wavelengths that are intensified in the reflected light? (b) Are any of these wavelengths in the visible spectrum?
35. A beam of 580-nm light passes through two closely spaced glass plates at close to normal incidence as shown in Figure P37.35. For what minimum nonzero

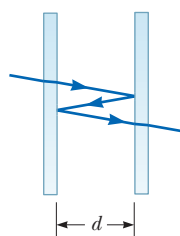


Figure P37.35

value of the plate separation d is the transmitted light bright?

36. An oil film ($n = 1.45$) floating on water is illuminated by white light at normal incidence. The film is 280 nm thick. Find (a) the wavelength and color of the light in the visible spectrum most strongly reflected and (b) the wavelength and color of the light in the spectrum most strongly transmitted. Explain your reasoning.
37. An air wedge is formed between two glass plates separated at one edge by a very fine wire of circular cross section as shown in Figure P37.37. When the wedge is illuminated from above by 600-nm light and viewed from above, 30 dark fringes are observed. Calculate the diameter d of the wire.

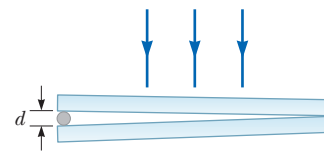


Figure P37.37 Problems 37, 41, 49, and 59.

38. Astronomers observe the chromosphere of the Sun with a filter that passes the red hydrogen spectral line of wavelength 656.3 nm, called the H_α line. The filter consists of a transparent dielectric of thickness d held between two partially aluminized glass plates. The filter is held at a constant temperature. (a) Find the minimum value of d that produces maximum transmission of perpendicular H_α light if the dielectric has an index of refraction of 1.378. (b) **What If?** If the temperature of the filter increases above the normal value, increasing its thickness, what happens to the transmitted wavelength? (c) The dielectric will also pass what near-visible wavelength? One of the glass plates is colored red to absorb this light.
39. When a liquid is introduced into the air space between the lens and the plate in a Newton's-rings apparatus, the diameter of the tenth ring changes from 1.50 to 1.31 cm. Find the index of refraction of the liquid.
40. A lens made of glass ($n_g = 1.52$) is coated with a thin film of MgF_2 ($n_s = 1.38$) of thickness t . Visible light is incident normally on the coated lens as in Figure P37.40. (a) For what minimum value of t will the

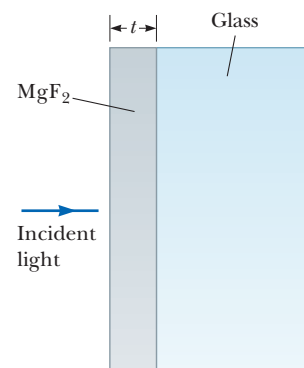


Figure P37.40

reflected light of wavelength 540 nm (in air) be missing? (b) Are there other values of t that will minimize the reflected light at this wavelength? Explain.

41. Two glass plates 10.0 cm long are in contact at one end and separated at the other end by a thread with a diameter $d = 0.0500$ mm (Fig. P37.37). Light containing the two wavelengths 400 nm and 600 nm is incident perpendicularly and viewed by reflection. At what distance from the contact point is the next dark fringe?

Section 37.6 The Michelson Interferometer

42. **M** Mirror M_1 in Figure 37.13 is moved through a displacement ΔL . During this displacement, 250 fringe reversals (formation of successive dark or bright bands) are counted. The light being used has a wavelength of 632.8 nm. Calculate the displacement ΔL .

43. **M** The Michelson interferometer can be used to measure the index of refraction of a gas by placing an evacuated transparent tube in the light path along one arm of the device. Fringe shifts occur as the gas is slowly added to the tube. Assume 600-nm light is used, the tube is 5.00 cm long, and 160 bright fringes pass on the screen as the pressure of the gas in the tube increases to atmospheric pressure. What is the index of refraction of the gas? *Hint:* The fringe shifts occur because the wavelength of the light changes inside the gas-filled tube.

44. One leg of a Michelson interferometer contains an evacuated cylinder of length L , having glass plates on each end. A gas is slowly leaked into the cylinder until a pressure of 1 atm is reached. If N bright fringes pass on the screen during this process when light of wavelength λ is used, what is the index of refraction of the gas? *Hint:* The fringe shifts occur because the wavelength of the light changes inside the gas-filled tube.

Additional Problems

45. Radio transmitter A operating at 60.0 MHz is 10.0 m from another similar transmitter B that is 180° out of phase with A. How far must an observer move from A toward B along the line connecting the two transmitters to reach the nearest point where the two beams are in phase?
46. A room is 6.0 m long and 3.0 m wide. At the front of the room, along one of the 3.0-m-wide walls, two loudspeakers are set 1.0 m apart, with the center point between them coinciding with the center point of the wall. The speakers emit a sound wave of a single frequency and a maximum in sound intensity is heard at the center of the back wall, 6.0 m from the speakers. What is the highest possible frequency of the sound from the speakers if no other maxima are heard anywhere along the back wall?
47. In an experiment similar to that of Example 37.1, green light with wavelength 560 nm, sent through a pair of slits $30.0 \mu\text{m}$ apart, produces bright fringes 2.24 cm apart on a screen 1.20 m away. If the apparatus is now submerged in a tank containing a sugar solution

with index of refraction 1.38, calculate the fringe separation for this same arrangement.

48. In the What If? section of Example 37.2, it was claimed that overlapping fringes in a two-slit interference pattern for two different wavelengths obey the following relationship even for large values of the angle θ :

$$\frac{m'}{m} = \frac{\lambda}{\lambda'}$$

- (a) Prove this assertion. (b) Using the data in Example 37.2, find the nonzero value of y on the screen at which the fringes from the two wavelengths first coincide.
49. An investigator finds a fiber at a crime scene that he wishes to use as evidence against a suspect. He gives the fiber to a technician to test the properties of the fiber. To measure the diameter d of the fiber, the technician places it between two flat glass plates at their ends as in Figure P37.37. When the plates, of length 14.0 cm, are illuminated from above with light of wavelength 650 nm, she observes interference bands separated by 0.580 mm. What is the diameter of the fiber?
50. Raise your hand and hold it flat. Think of the space between your index finger and your middle finger as one slit and think of the space between middle finger and ring finger as a second slit. (a) Consider the interference resulting from sending coherent visible light perpendicularly through this pair of openings. Compute an order-of-magnitude estimate for the angle between adjacent zones of constructive interference. (b) To make the angles in the interference pattern easy to measure with a plastic protractor, you should use an electromagnetic wave with frequency of what order of magnitude? (c) How is this wave classified on the electromagnetic spectrum?
51. Two coherent waves, coming from sources at different locations, move along the x axis. Their wave functions are

$$E_1 = 860 \sin \left[\frac{2\pi x_1}{650} - 924\pi t + \frac{\pi}{6} \right]$$

and

$$E_2 = 860 \sin \left[\frac{2\pi x_2}{650} - 924\pi t + \frac{\pi}{8} \right]$$

where E_1 and E_2 are in volts per meter, x_1 and x_2 are in nanometers, and t is in picoseconds. When the two waves are superposed, determine the relationship between x_1 and x_2 that produces constructive interference.

52. In a Young's interference experiment, the two slits are separated by 0.150 mm and the incident light includes two wavelengths: $\lambda_1 = 540$ nm (green) and $\lambda_2 = 450$ nm (blue). The overlapping interference patterns are observed on a screen 1.40 m from the slits. Calculate the minimum distance from the center of the screen to a point where a bright fringe of the green light coincides with a bright fringe of the blue light.
53. In a Young's double-slit experiment using light of wavelength λ , a thin piece of Plexiglas having index of refraction n covers one of the slits. If the center point

on the screen is a dark spot instead of a bright spot, what is the minimum thickness of the Plexiglas?

- 54. Review.** A flat piece of glass is held stationary and horizontal above the highly polished, flat top end of a 10.0-cm-long vertical metal rod that has its lower end rigidly fixed. The thin film of air between the rod and glass is observed to be bright by reflected light when it is illuminated by light of wavelength 500 nm. As the temperature is slowly increased by 25.0°C, the film changes from bright to dark and back to bright 200 times. What is the coefficient of linear expansion of the metal?
- 55.** A certain grade of crude oil has an index of refraction of 1.25. A ship accidentally spills 1.00 m³ of this oil into the ocean, and the oil spreads into a thin, uniform slick. If the film produces a first-order maximum of light of wavelength 500 nm normally incident on it, how much surface area of the ocean does the oil slick cover? Assume the index of refraction of the ocean water is 1.34.
- 56.** The waves from a radio station can reach a home receiver by two paths. One is a straight-line path from transmitter to home, a distance of 30.0 km. The second is by reflection from the ionosphere (a layer of ionized air molecules high in the atmosphere). Assume this reflection takes place at a point midway between receiver and transmitter, the wavelength broadcast by the radio station is 350 m, and no phase change occurs on reflection. Find the minimum height of the ionospheric layer that could produce destructive interference between the direct and reflected beams.
- 57.** Interference effects are produced at point P on a screen as a result of direct rays from a 500-nm source and reflected rays from the mirror as shown in Figure P37.57. Assume the source is 100 m to the left of the screen and 1.00 cm above the mirror. Find the distance y to the first dark band above the mirror.

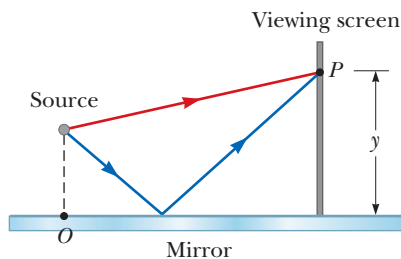


Figure P37.57

- 58.** Measurements are made of the intensity distribution within the central bright fringe in a Young's interference pattern (see Fig. 37.6). At a particular value of y , it is found that $I/I_{\max} = 0.810$ when 600-nm light is used. What wavelength of light should be used to reduce the relative intensity at the same location to 64.0% of the maximum intensity?
- 59.** Many cells are transparent and colorless. Structures of great interest in biology and medicine can be practically invisible to ordinary microscopy. To indicate the size and shape of cell structures, an *interference micro-*

scope reveals a difference in index of refraction as a shift in interference fringes. The idea is exemplified in the following problem. An air wedge is formed between two glass plates in contact along one edge and slightly separated at the opposite edge as in Figure P37.37. When the plates are illuminated with monochromatic light from above, the reflected light has 85 dark fringes. Calculate the number of dark fringes that appear if water ($n = 1.33$) replaces the air between the plates.

- 60.** Consider the double-slit arrangement shown in Figure P37.60, where the slit separation is d and the distance from the slit to the screen is L . A sheet of transparent plastic having an index of refraction n and thickness t is placed over the upper slit. As a result, the central maximum of the interference pattern moves upward a distance y' . Find y' .

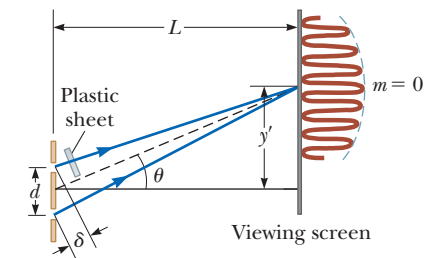


Figure P37.60

- 61.** Figure P37.61 shows a radio-wave transmitter and a receiver separated by a distance $d = 50.0$ m and both a distance $h = 35.0$ m above the ground. The receiver can receive signals both directly from the transmitter and indirectly from signals that reflect from the ground. Assume the ground is level between the transmitter and receiver and a 180° phase shift occurs upon reflection. Determine the longest wavelengths that interfere (a) constructively and (b) destructively.

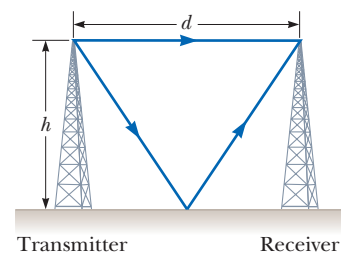


Figure P37.61 Problems 61 and 62.

- 62.** Figure P37.61 shows a radio-wave transmitter and a receiver separated by a distance d and both a distance h above the ground. The receiver can receive signals both directly from the transmitter and indirectly from signals that reflect from the ground. Assume the ground is level between the transmitter and receiver and a 180° phase shift occurs upon reflection. Determine the longest wavelengths that interfere (a) constructively and (b) destructively.
- 63.** In a Newton's-rings experiment, a plano-convex glass ($n = 1.52$) lens having radius $r = 5.00$ cm is placed on a flat plate as shown in Figure P37.63 (page 1158). When

light of wavelength $\lambda = 650$ nm is incident normally, 55 bright rings are observed, with the last one precisely on the edge of the lens. (a) What is the radius R of curvature of the convex surface of the lens? (b) What is the focal length of the lens?

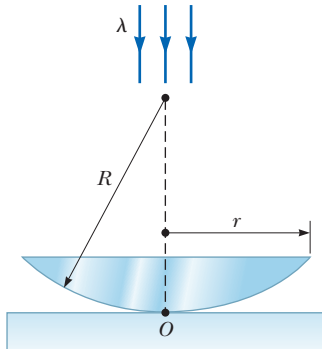


Figure P37.63

64. Why is the following situation impossible? A piece of transparent material having an index of refraction $n = 1.50$ is cut into the shape of a wedge as shown in Figure P37.64. Both the top and bottom surfaces of the wedge are in contact with air. Monochromatic light of wavelength $\lambda = 632.8$ nm is normally incident from above, and the wedge is viewed from above. Let $h = 1.00$ mm represent the height of the wedge and $\ell = 0.500$ m its length. A thin-film interference pattern appears in the wedge due to reflection from the top and bottom surfaces. You have been given the task of counting the number of bright fringes that appear in the entire length ℓ of the wedge. You find this task tedious, and your concentration is broken by a noisy distraction after accurately counting 5 000 bright fringes.

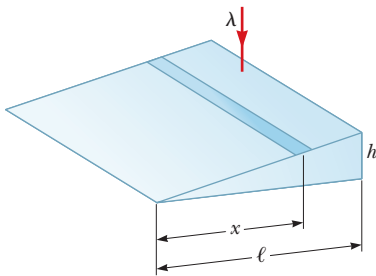


Figure P37.64

65. A plano-concave lens having index of refraction 1.50 is placed on a flat glass plate as shown in Figure P37.65. Its curved surface, with radius of curvature 8.00 m, is on the bottom. The lens is illuminated from above with yellow sodium light of wavelength 589 nm, and a series of concentric bright and dark rings is observed by reflection. The interference pattern has a dark spot

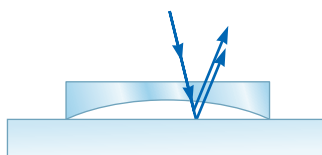


Figure P37.65

at the center that is surrounded by 50 dark rings, the largest of which is at the outer edge of the lens. (a) What is the thickness of the air layer at the center of the interference pattern? (b) Calculate the radius of the outermost dark ring. (c) Find the focal length of the lens.

66. A plano-convex lens has index of refraction n . The curved side of the lens has radius of curvature R and rests on a flat glass surface of the same index of refraction, with a film of index n_{film} between them, as shown in Figure 37.66. The lens is illuminated from above by light of wavelength λ . Show that the dark Newton's rings have radii given approximately by

$$r \approx \sqrt{\frac{m\lambda R}{n_{\text{film}}}}$$

where $r \ll R$ and m is an integer.

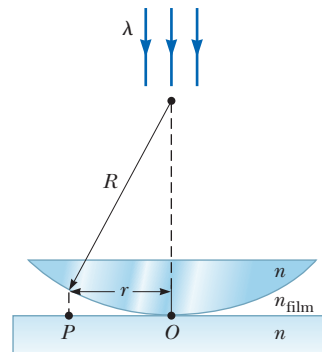


Figure P37.66

67. Interference fringes are produced using Lloyd's mirror and a source S of wavelength $\lambda = 606$ nm as shown in Figure P37.67. Fringes separated by $\Delta y = 1.20$ mm are formed on a screen $L = 2.00$ m from the source. Find the vertical distance h of the source above the reflecting surface.

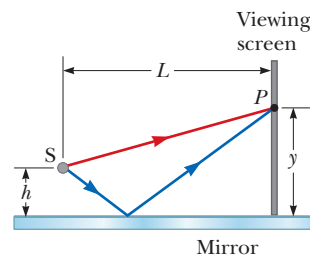


Figure P37.67

68. The quantity nt in Equations 37.17 and 37.18 is called the *optical path length* corresponding to the geometrical distance t and is analogous to the quantity δ in Equation 37.1, the path difference. The optical path length is proportional to n because a larger index of refraction shortens the wavelength, so more cycles of a wave fit into a particular geometrical distance. (a) Assume a mixture of corn syrup and water is prepared in a tank, with its index of refraction n increasing uniformly from 1.33 at $y = 20.0$ cm at the top to 1.90 at $y = 0$. Write the index of refraction $n(y)$ as a function of y .

(b) Compute the optical path length corresponding to the 20.0-cm height of the tank by calculating

$$\int_0^{20 \text{ cm}} n(y) dy$$

(c) Suppose a narrow beam of light is directed into the mixture at a nonzero angle with respect to the normal to the surface of the mixture. Qualitatively describe its path.

69. Astronomers observe a 60.0-MHz radio source both directly and by reflection from the sea as shown in Figure P37.17. If the receiving dish is 20.0 m above sea level, what is the angle of the radio source above the horizon at first maximum?

70. Figure CQ37.2 shows an unbroken soap film in a circular frame. The film thickness increases from top to bottom, slowly at first and then rapidly. As a simpler model, consider a soap film ($n = 1.33$) contained within a rectangular wire frame. The frame is held vertically so that the film drains downward and forms a wedge with flat faces. The thickness of the film at the top is essentially zero. The film is viewed in reflected white light with near-normal incidence, and the first violet ($\lambda = 420 \text{ nm}$) interference band is observed 3.00 cm from the top edge of the film. (a) Locate the first red ($\lambda = 680 \text{ nm}$) interference band. (b) Determine the film thickness at the positions of the violet and red bands. (c) What is the wedge angle of the film?

Challenge Problems

71. Our discussion of the techniques for determining constructive and destructive interference by reflection from a thin film in air has been confined to rays striking the film at nearly normal incidence. **What If?** Assume a ray is incident at an angle of 30.0° (relative to the normal) on a film with index of refraction 1.38 surrounded by vacuum. Calculate the minimum thickness for constructive interference of sodium light with a wavelength of 590 nm.

72. The condition for constructive interference by reflection from a thin film in air as developed in Section 37.5 assumes nearly normal incidence. **What If?** Suppose the light is incident on the film at a nonzero angle θ_1 (relative to the normal). The index of refraction of the film is n , and the film is surrounded by vacuum. Find the condition for constructive interference that relates the thickness t of the film, the index of refraction n of the film, the wavelength λ of the light, and the angle of incidence θ_1 .

73. Both sides of a uniform film that has index of refraction n and thickness d are in contact with air. For normal incidence of light, an intensity minimum is observed in the reflected light at λ_2 and an intensity maximum is observed at λ_1 , where $\lambda_1 > \lambda_2$. (a) Assuming no intensity minima are observed between λ_1 and λ_2 , find an expression for the integer m in Equations 37.17 and 37.18 in terms of the wavelengths λ_1 and λ_2 . (b) Assuming $n = 1.40$, $\lambda_1 = 500 \text{ nm}$, and $\lambda_2 = 370 \text{ nm}$, determine the best estimate for the thickness of the film.

74. Slit 1 of a double slit is wider than slit 2 so that the light from slit 1 has an amplitude 3.00 times that of the light from slit 2. Show that Equation 37.13 is replaced by the equation $I = I_{\text{max}}(1 + 3 \cos^2 \phi/2)$ for this situation.

75. Monochromatic light of wavelength 620 nm passes through a very narrow slit S and then strikes a screen in which are two parallel slits, S_1 and S_2 , as shown in Figure P37.75. Slit S_1 is directly in line with S and at a distance of $L = 1.20 \text{ m}$ away from S , whereas S_2 is displaced a distance d to one side. The light is detected at point P on a second screen, equidistant from S_1 and S_2 . When either slit S_1 or S_2 is open, equal light intensities are measured at point P . When both slits are open, the intensity is three times larger. Find the minimum possible value for the slit separation d .

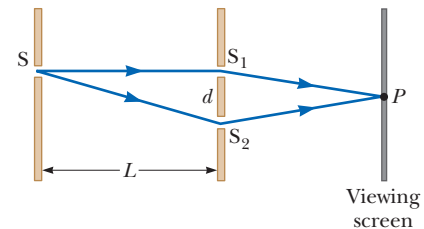


Figure P37.75

76. A plano-convex lens having a radius of curvature of $r = 4.00 \text{ m}$ is placed on a concave glass surface whose radius of curvature is $R = 12.0 \text{ m}$ as shown in Figure P37.76. Assuming 500-nm light is incident normal to the flat surface of the lens, determine the radius of the 100th bright ring.

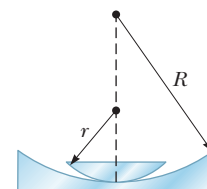


Figure P37.76

Diffraction Patterns and Polarization

- 38.1 Introduction to Diffraction Patterns
- 38.2 Diffraction Patterns from Narrow Slits
- 38.3 Resolution of Single-Slit and Circular Apertures
- 38.4 The Diffraction Grating
- 38.5 Diffraction of X-Rays by Crystals
- 38.6 Polarization of Light Waves



The Hubble Space Telescope does its viewing above the atmosphere and does not suffer from the atmospheric blurring, caused by air turbulence, that plagues ground-based telescopes. Despite this advantage, it does have limitations due to diffraction effects. In this chapter, we show how the wave nature of light limits the ability of any optical system to distinguish between closely spaced objects.


(NASA Hubble Space Telescope Collection)

When plane light waves pass through a small aperture in an opaque barrier, the aperture acts as if it were a point source of light, with waves entering the shadow region behind the barrier. This phenomenon, known as diffraction, was first mentioned in Section 35.3, and can be described only with a wave model for light. In this chapter, we investigate the features of the *diffraction pattern* that occurs when the light from the aperture is allowed to fall upon a screen.

In Chapter 34, we learned that electromagnetic waves are transverse. That is, the electric and magnetic field vectors associated with electromagnetic waves are perpendicular to the direction of wave propagation. In this chapter, we show that under certain conditions these transverse waves with electric field vectors in all possible transverse directions can be *polarized* in various ways. In other words, only certain directions of the electric field vectors are present in the polarized wave.

38.1 Introduction to Diffraction Patterns

In Sections 35.3 and 37.1, we discussed that light of wavelength comparable to or larger than the width of a slit spreads out in all forward directions upon passing through the slit. This phenomenon is called *diffraction*. When light passes through a narrow slit, it spreads beyond the narrow path defined by the slit into regions that would be in shadow if light traveled in straight lines. Other waves, such as sound waves and water waves, also have this property of spreading when passing through apertures or by sharp edges.



Douglas C. Johnson/California State Polytechnic University, Pomona

Figure 38.1 The diffraction pattern that appears on a screen when light passes through a narrow vertical slit. The pattern consists of a broad central fringe and a series of less intense and narrower side fringes.

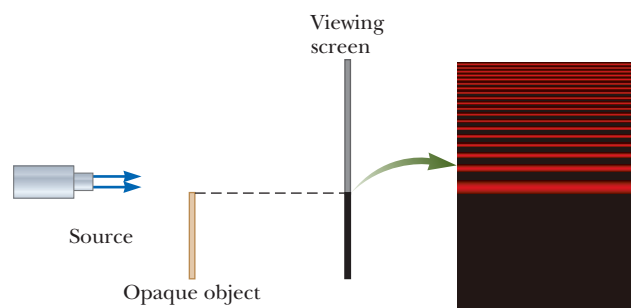
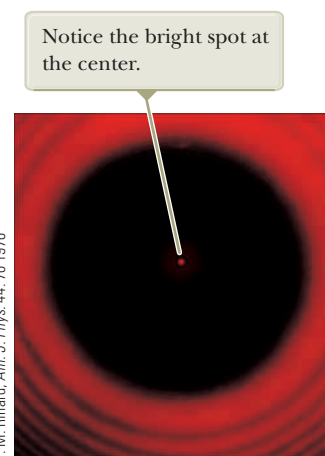


Figure 38.2 Light from a small source passes by the edge of an opaque object and continues on to a screen. A diffraction pattern consisting of bright and dark fringes appears on the screen in the region above the edge of the object.

You might expect that the light passing through a small opening would simply result in a broad region of light on a screen due to the spreading of the light as it passes through the opening. We find something more interesting, however. A **diffraction pattern** consisting of light and dark areas is observed, somewhat similar to the interference patterns discussed earlier. For example, when a narrow slit is placed between a distant light source (or a laser beam) and a screen, the light produces a diffraction pattern like that shown in Figure 38.1. The pattern consists of a broad, intense central band (called the **central maximum**) flanked by a series of narrower, less intense additional bands (called **side maxima** or **secondary maxima**) and a series of intervening dark bands (or **minima**). Figure 38.2 shows a diffraction pattern associated with light passing by the edge of an object. Again we see bright and dark fringes, which is reminiscent of an interference pattern.

Figure 38.3 shows a diffraction pattern associated with the shadow of a penny. A bright spot occurs at the center, and circular fringes extend outward from the shadow's edge. We can explain the central bright spot by using the wave theory of light, which predicts constructive interference at this point. From the viewpoint of ray optics (in which light is viewed as rays traveling in straight lines), we expect the center of the shadow to be dark because that part of the viewing screen is completely shielded by the penny.

Shortly before the central bright spot was first observed, one of the supporters of ray optics, Simeon Poisson, argued that if Augustin Fresnel's wave theory of light were valid, a central bright spot should be observed in the shadow of a circular object illuminated by a point source of light. To Poisson's astonishment, the spot was observed by Dominique Arago shortly thereafter. Therefore, Poisson's prediction reinforced the wave theory rather than disproving it.



P. M. Rimard, *Am. J. Phys.* 44: 70 1976

Figure 38.3 Diffraction pattern created by the illumination of a penny, with the penny positioned midway between the screen and light source.

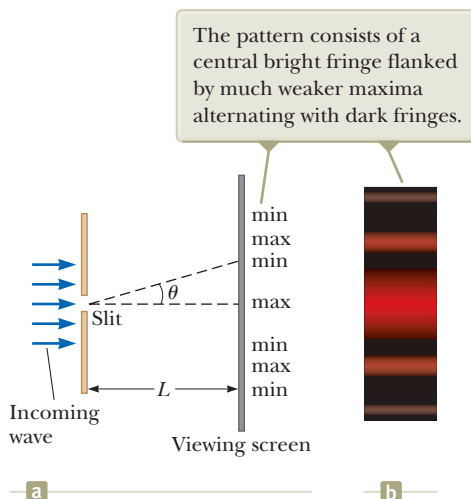
38.2 Diffraction Patterns from Narrow Slits

Let's consider a common situation, that of light passing through a narrow opening modeled as a slit and projected onto a screen. To simplify our analysis, we assume the observing screen is far from the slit and the rays reaching the screen are approximately parallel. (This situation can also be achieved experimentally by using a converging lens to focus the parallel rays on a nearby screen.) In this model, the pattern on the screen is called a **Fraunhofer diffraction pattern**.¹

Figure 38.4a (page 1162) shows light entering a single slit from the left and diffracting as it propagates toward a screen. Figure 38.4b shows the fringe structure of

¹If the screen is brought close to the slit (and no lens is used), the pattern is a *Fresnel* diffraction pattern. The Fresnel pattern is more difficult to analyze, so we shall restrict our discussion to Fraunhofer diffraction.

Figure 38.4 (a) Geometry for analyzing the Fraunhofer diffraction pattern of a single slit. (Drawing not to scale.) (b) Simulation of a single-slit Fraunhofer diffraction pattern.

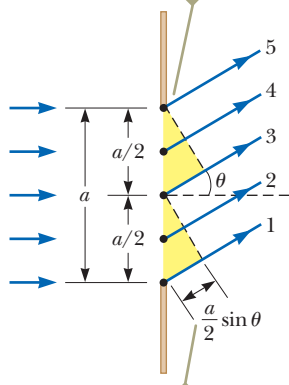


Pitfall Prevention 38.1

Diffraction Versus Interference Pattern

Diffraction refers to the general behavior of waves spreading out as they pass through a slit. We used diffraction in explaining the existence of an interference pattern in Chapter 37. A *diffraction pattern* is actually a misnomer, but is deeply entrenched in the language of physics. The diffraction pattern seen on a screen when a single slit is illuminated is actually another interference pattern. The interference is between parts of the incident light illuminating different regions of the slit.

Each portion of the slit acts as a point source of light waves.



The path difference between rays 1 and 3, rays 2 and 4, or rays 3 and 5 is $(a/2) \sin \theta$.

Figure 38.5 Paths of light rays that encounter a narrow slit of width a and diffract toward a screen in the direction described by angle θ (not to scale).

a Fraunhofer diffraction pattern. A bright fringe is observed along the axis at $\theta = 0$, with alternating dark and bright fringes on each side of the central bright fringe.

Until now, we have assumed slits are point sources of light. In this section, we abandon that assumption and see how the finite width of slits is the basis for understanding Fraunhofer diffraction. We can explain some important features of this phenomenon by examining waves coming from various portions of the slit as shown in Figure 38.5. According to Huygens's principle, each portion of the slit acts as a source of light waves. Hence, light from one portion of the slit can interfere with light from another portion, and the resultant light intensity on a viewing screen depends on the direction θ . Based on this analysis, we recognize that a diffraction pattern is actually an interference pattern in which the different sources of light are different portions of the single slit! Therefore, the diffraction patterns we discuss in this chapter are applications of the waves in interference analysis model.

To analyze the diffraction pattern, let's divide the slit into two halves as shown in Figure 38.5. Keeping in mind that all the waves are in phase as they leave the slit, consider rays 1 and 3. As these two rays travel toward a viewing screen far to the right of the figure, ray 1 travels farther than ray 3 by an amount equal to the path difference $(a/2) \sin \theta$, where a is the width of the slit. Similarly, the path difference between rays 2 and 4 is also $(a/2) \sin \theta$, as is that between rays 3 and 5. If this path difference is exactly half a wavelength (corresponding to a phase difference of 180°), the pairs of waves cancel each other and destructive interference results. This cancellation occurs for any two rays that originate at points separated by half the slit width because the phase difference between two such points is 180° . Therefore, waves from the upper half of the slit interfere destructively with waves from the lower half when

$$\frac{a}{2} \sin \theta = \frac{\lambda}{2}$$

or, if we consider waves at angle θ both above the dashed line in Figure 38.5 and below,

$$\sin \theta = \pm \frac{\lambda}{a}$$

Dividing the slit into four equal parts and using similar reasoning, we find that the viewing screen is also dark when

$$\sin \theta = \pm 2 \frac{\lambda}{a}$$

Likewise, dividing the slit into six equal parts shows that darkness occurs on the screen when

$$\sin \theta = \pm 3 \frac{\lambda}{a}$$

Therefore, the general condition for destructive interference is

$$\sin \theta_{\text{dark}} = m \frac{\lambda}{a} \quad m = \pm 1, \pm 2, \pm 3, \dots \quad (38.1)$$

◀ **Condition for destructive interference for a single slit**

This equation gives the values of θ_{dark} for which the diffraction pattern has zero light intensity, that is, when a dark fringe is formed. It tells us nothing, however, about the variation in light intensity along the screen. The general features of the intensity distribution are shown in Figure 38.4. A broad, central bright fringe is observed; this fringe is flanked by much weaker bright fringes alternating with dark fringes. The various dark fringes occur at the values of θ_{dark} that satisfy Equation 38.1. Each bright-fringe peak lies approximately halfway between its bordering dark-fringe minima. Notice that the central bright maximum is twice as wide as the secondary maxima. There is no central dark fringe, represented by the absence of $m = 0$ in Equation 38.1.

Quick Quiz 38.1 Suppose the slit width in Figure 38.4 is made half as wide. Does the central bright fringe (a) become wider, (b) remain the same, or (c) become narrower?

Pitfall Prevention 38.2

Similar Equation Warning! Equation 38.1 has exactly the same form as Equation 37.2, with d , the slit separation, used in Equation 37.2 and a , the slit width, used in Equation 38.1. Equation 37.2, however, describes the *bright* regions in a two-slit interference pattern, whereas Equation 38.1 describes the *dark* regions in a single-slit diffraction pattern.

Example 38.1

Where Are the Dark Fringes? **AM**

Light of wavelength 580 nm is incident on a slit having a width of 0.300 mm. The viewing screen is 2.00 m from the slit. Find the width of the central bright fringe.

SOLUTION

Conceptualize Based on the problem statement, we imagine a single-slit diffraction pattern similar to that in Figure 38.4.

Categorize We categorize this example as a straightforward application of our discussion of single-slit diffraction patterns, which comes from the *waves in interference* analysis model.

Analyze Evaluate Equation 38.1 for the two dark fringes that flank the central bright fringe, which correspond to $m = \pm 1$:

$$\sin \theta_{\text{dark}} = \pm \frac{\lambda}{a}$$

Let y represent the vertical position along the viewing screen in Figure 38.4a, measured from the point on the screen directly behind the slit. Then, $\tan \theta_{\text{dark}} = y_1/L$, where the subscript 1 refers to the first dark fringe. Because θ_{dark} is very small, we can use the approximation $\sin \theta_{\text{dark}} \approx \tan \theta_{\text{dark}}$; therefore, $y_1 = L \sin \theta_{\text{dark}}$.

The width of the central bright fringe is twice the absolute value of y_1 :

$$2|y_1| = 2|L \sin \theta_{\text{dark}}| = 2 \left| \pm L \frac{\lambda}{a} \right| = 2L \frac{\lambda}{a} = 2(2.00 \text{ m}) \frac{580 \times 10^{-9} \text{ m}}{0.300 \times 10^{-3} \text{ m}} = 7.73 \times 10^{-3} \text{ m} = 7.73 \text{ mm}$$

Finalize Notice that this value is much greater than the width of the slit. Let's explore below what happens if we change the slit width.

WHAT IF? What if the slit width is increased by an order of magnitude to 3.00 mm? What happens to the diffraction pattern?

Answer Based on Equation 38.1, we expect that the angles at which the dark bands appear will decrease as a increases. Therefore, the diffraction pattern narrows.

Repeat the calculation with the larger slit width:

$$2|y_1| = 2L \frac{\lambda}{a} = 2(2.00 \text{ m}) \frac{580 \times 10^{-9} \text{ m}}{3.00 \times 10^{-3} \text{ m}} = 7.73 \times 10^{-4} \text{ m} = 0.773 \text{ mm}$$

Notice that this result is *smaller* than the width of the slit. In general, for large values of a , the various maxima and minima are so closely spaced that only a large, central bright area resembling the geometric image of the slit is observed. This concept is very important in the performance of optical instruments such as telescopes.

Intensity of Single-Slit Diffraction Patterns

Analysis of the intensity variation in a diffraction pattern from a single slit of width a shows that the intensity is given by

Intensity of a single-slit Fraunhofer diffraction pattern

$$I = I_{\max} \left[\frac{\sin(\pi a \sin \theta / \lambda)}{\pi a \sin \theta / \lambda} \right]^2 \quad (38.2)$$

where I_{\max} is the intensity at $\theta = 0$ (the central maximum) and λ is the wavelength of light used to illuminate the slit. This expression shows that *minima* occur when

$$\frac{\pi a \sin \theta_{\text{dark}}}{\lambda} = m\pi$$

or

Condition for intensity minima for a single slit

$$\sin \theta_{\text{dark}} = m \frac{\lambda}{a} \quad m = \pm 1, \pm 2, \pm 3, \dots$$

in agreement with Equation 38.1.

Figure 38.6a represents a plot of the intensity in the single-slit pattern as given by Equation 38.2, and Figure 38.6b is a simulation of a single-slit Fraunhofer diffraction pattern. Notice that most of the light intensity is concentrated in the central bright fringe.

Intensity of Two-Slit Diffraction Patterns

When more than one slit is present, we must consider not only diffraction patterns due to the individual slits but also the interference patterns due to the waves coming from different slits. Notice the curved dashed lines in Figure 37.7 in Chapter 37, which indicate a decrease in intensity of the interference maxima as θ increases. This decrease is due to a diffraction pattern. The interference patterns in that figure are located entirely within the central bright fringe of the diffraction pattern, so the only hint of the diffraction pattern we see is the falloff in intensity toward the outside of the pattern. To determine the effects of both two-slit interference and a single-slit diffraction pattern from each slit from a wider viewpoint than that in Figure 37.7, we combine Equations 37.14 and 38.2:

$$I = I_{\max} \cos^2 \left(\frac{\pi d \sin \theta}{\lambda} \right) \left[\frac{\sin(\pi a \sin \theta / \lambda)}{\pi a \sin \theta / \lambda} \right]^2 \quad (38.3)$$

Although this expression looks complicated, it merely represents the single-slit diffraction pattern (the factor in square brackets) acting as an “envelope” for a two-slit interference pattern (the cosine-squared factor) as shown in Figure 38.7. The broken

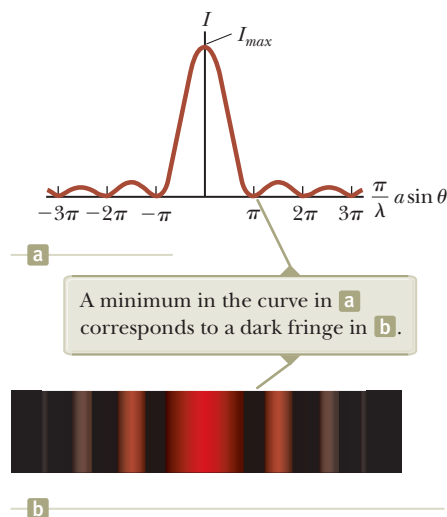


Figure 38.6 (a) A plot of light intensity I versus $(\pi/\lambda)a \sin \theta$ for the single-slit Fraunhofer diffraction pattern. (b) Simulation of a single-slit Fraunhofer diffraction pattern.

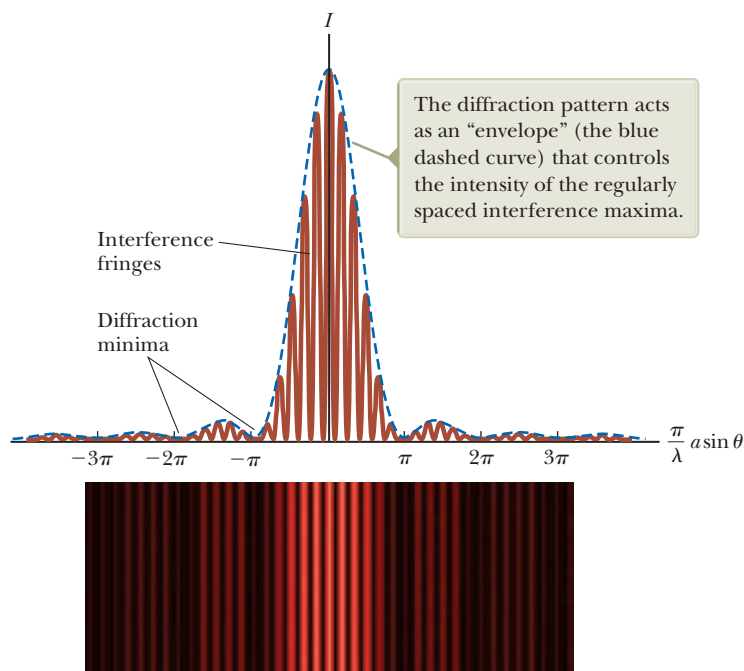


Figure 38.7 The combined effects of two-slit and single-slit interference. This pattern is produced when 650-nm light waves pass through two 3.0- μm slits that are 18 μm apart.

blue curve in Figure 38.7 represents the factor in square brackets in Equation 38.3. The cosine-squared factor by itself would give a series of peaks all with the same height as the highest peak of the red-brown curve in Figure 38.7. Because of the effect of the square-bracket factor, however, these peaks vary in height as shown.

Equation 37.2 indicates the conditions for interference maxima as $d \sin \theta = m\lambda$, where d is the distance between the two slits. Equation 38.1 specifies that the first diffraction minimum occurs when $a \sin \theta = \lambda$, where a is the slit width. Dividing Equation 37.2 by Equation 38.1 (with $m = 1$) allows us to determine which interference maximum coincides with the first diffraction minimum:

$$\frac{d \sin \theta}{a \sin \theta} = \frac{m\lambda}{\lambda}$$

$$\frac{d}{a} = m \quad (38.4)$$

In Figure 38.7, $d/a = 18 \mu\text{m}/3.0 \mu\text{m} = 6$. Therefore, the sixth interference maximum (if we count the central maximum as $m = 0$) is aligned with the first diffraction minimum and is dark.

- Quick Quiz 38.2** Consider the central peak in the diffraction envelope in Figure 38.7 and look closely at the horizontal scale. Suppose the wavelength of the light is changed to 450 nm. What happens to this central peak? (a) The width of the peak decreases, and the number of interference fringes it encloses decreases. (b) The width of the peak decreases, and the number of interference fringes it encloses increases. (c) The width of the peak decreases, and the number of interference fringes it encloses remains the same. (d) The width of the peak increases, and the number of interference fringes it encloses decreases. (e) The width of the peak increases, and the number of interference fringes it encloses increases. (f) The width of the peak increases, and the number of interference fringes it encloses remains the same. (g) The width of the peak remains the same, and the number of interference fringes it encloses decreases. (h) The width of the peak remains the same, and the number of interference fringes it encloses increases. (i) The width of the peak remains the same, and the number of interference fringes it encloses remains the same.

38.3 Resolution of Single-Slit and Circular Apertures

The ability of optical systems to distinguish between closely spaced objects is limited because of the wave nature of light. To understand this limitation, consider Figure 38.8, which shows two light sources far from a narrow slit of width a . The sources can be two noncoherent point sources S_1 and S_2 ; for example, they could be two distant stars. If no interference occurred between light passing through different parts of the slit, two distinct bright spots (or images) would be observed on the viewing screen. Because of such interference, however, each source is imaged as a bright central region flanked by weaker bright and dark fringes, a diffraction pattern. What is observed on the screen is the sum of two diffraction patterns: one from S_1 and the other from S_2 .

If the two sources are far enough apart to keep their central maxima from overlapping as in Figure 38.8a, their images can be distinguished and are said to be *resolved*. If the sources are close together as in Figure 38.8b, however, the two central maxima overlap and the images are not resolved. To determine whether two images are resolved, the following condition is often used:

When the central maximum of one image falls on the first minimum of another image, the images are said to be just resolved. This limiting condition of resolution is known as **Rayleigh's criterion**.

From Rayleigh's criterion, we can determine the minimum angular separation θ_{\min} subtended by the sources at the slit in Figure 38.8 for which the images are just resolved. Equation 38.1 indicates that the first minimum in a single-slit diffraction pattern occurs at the angle for which

$$\sin \theta = \frac{\lambda}{a}$$

where a is the width of the slit. According to Rayleigh's criterion, this expression gives the smallest angular separation for which the two images are resolved. Because $\lambda \ll a$ in most situations, $\sin \theta$ is small and we can use the approximation $\sin \theta \approx \theta$. Therefore, the limiting angle of resolution for a slit of width a is

$$\theta_{\min} = \frac{\lambda}{a} \quad (38.5)$$

where θ_{\min} is expressed in radians. Hence, the angle subtended by the two sources at the slit must be greater than λ/a if the images are to be resolved.

Many optical systems use circular apertures rather than slits. The diffraction pattern of a circular aperture as shown in the photographs of Figure 38.9 consists of

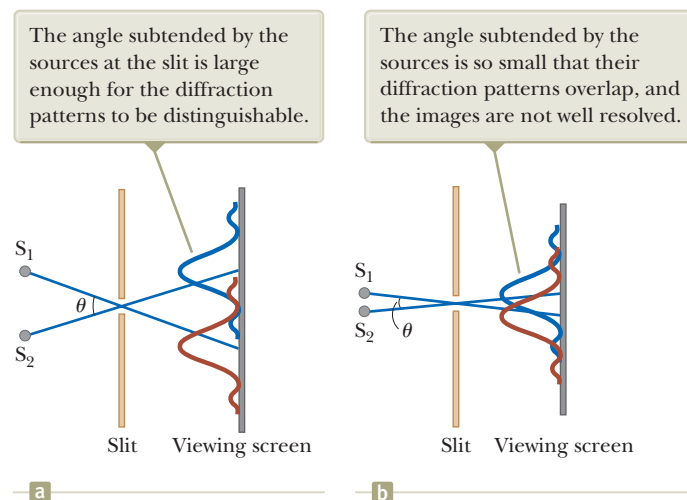


Figure 38.8 Two point sources far from a narrow slit each produce a diffraction pattern. (a) The sources are separated by a large angle. (b) The sources are separated by a small angle. (Notice that the angles are greatly exaggerated. The drawing is not to scale.)

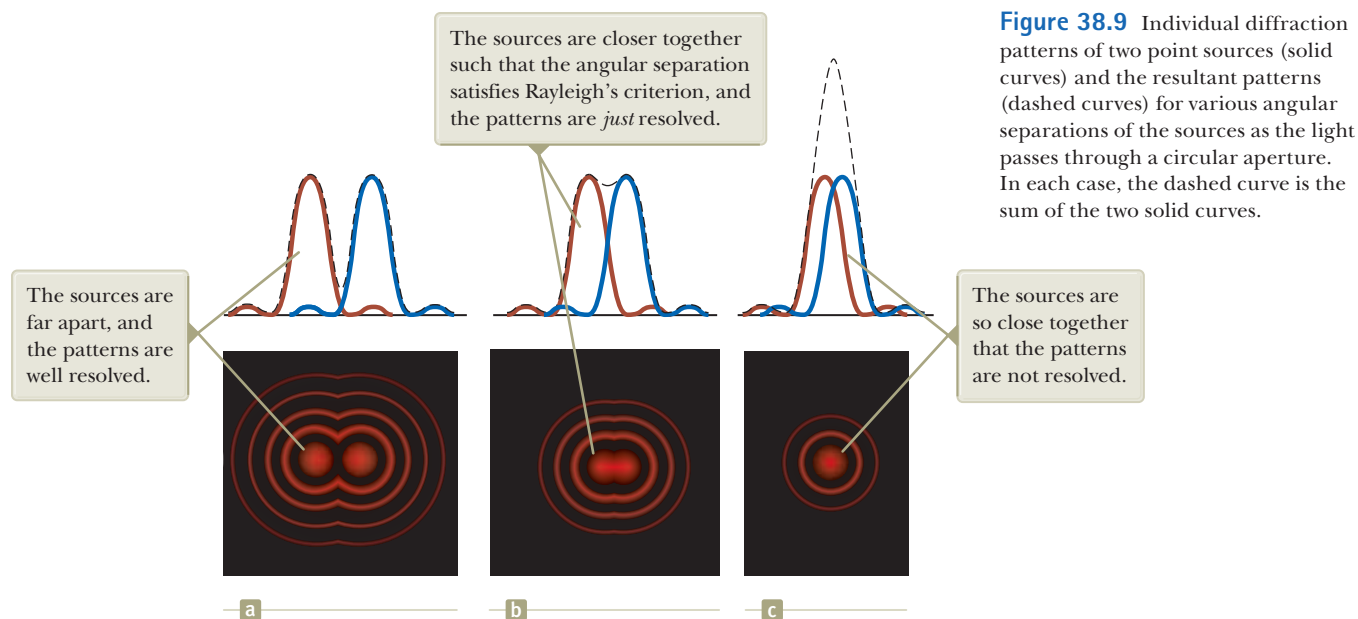


Figure 38.9 Individual diffraction patterns of two point sources (solid curves) and the resultant patterns (dashed curves) for various angular separations of the sources as the light passes through a circular aperture. In each case, the dashed curve is the sum of the two solid curves.

a central circular bright disk surrounded by progressively fainter bright and dark rings. Figure 38.9 shows diffraction patterns for three situations in which light from two point sources passes through a circular aperture. When the sources are far apart, their images are well resolved (Fig. 38.9a). When the angular separation of the sources satisfies Rayleigh's criterion, the images are just resolved (Fig. 38.9b). Finally, when the sources are close together, the images are said to be unresolved (Fig. 38.9c) and the pattern looks like that of a single source.

Analysis shows that the limiting angle of resolution of the circular aperture is

$$\theta_{\min} = 1.22 \frac{\lambda}{D} \quad (38.6)$$

◀ Limiting angle of resolution for a circular aperture

where D is the diameter of the aperture. This expression is similar to Equation 38.5 except for the factor 1.22, which arises from a mathematical analysis of diffraction from the circular aperture.

Quick Quiz 38.3 Cat's eyes have pupils that can be modeled as vertical slits. At night, would cats be more successful in resolving (a) headlights on a distant car or (b) vertically separated lights on the mast of a distant boat?

Quick Quiz 38.4 Suppose you are observing a binary star with a telescope and are having difficulty resolving the two stars. You decide to use a colored filter to maximize the resolution. (A filter of a given color transmits only that color of light.) What color filter should you choose? (a) blue (b) green (c) yellow (d) red

Example 38.2 Resolution of the Eye

Light of wavelength 500 nm, near the center of the visible spectrum, enters a human eye. Although pupil diameter varies from person to person, let's estimate a daytime diameter of 2 mm.

(A) Estimate the limiting angle of resolution for this eye, assuming its resolution is limited only by diffraction.

SOLUTION

Conceptualize Identify the pupil of the eye as the aperture through which the light travels. Light passing through this small aperture causes diffraction patterns to occur on the retina.

Categorize We determine the result using equations developed in this section, so we categorize this example as a substitution problem.

continued

38.2 continued

Use Equation 38.6, taking $\lambda = 500 \text{ nm}$ and $D = 2 \text{ mm}$:

$$\begin{aligned}\theta_{\min} &= 1.22 \frac{\lambda}{D} = 1.22 \left(\frac{5.00 \times 10^{-7} \text{ m}}{2 \times 10^{-3} \text{ m}} \right) \\ &= 3 \times 10^{-4} \text{ rad} \approx 1 \text{ min of arc}\end{aligned}$$

(B) Determine the minimum separation distance d between two point sources that the eye can distinguish if the point sources are a distance $L = 25 \text{ cm}$ from the observer (Fig. 38.10).

SOLUTION

Noting that θ_{\min} is small, find d :

$$\sin \theta_{\min} \approx \theta_{\min} \approx \frac{d}{L} \rightarrow d = L\theta_{\min}$$

Substitute numerical values:

$$d = (25 \text{ cm})(3 \times 10^{-4} \text{ rad}) = 8 \times 10^{-3} \text{ cm}$$

This result is approximately equal to the thickness of a human hair.

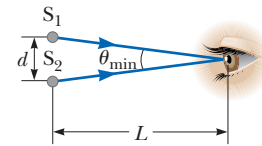


Figure 38.10 (Example 38.2) Two point sources separated by a distance d as observed by the eye.

Example 38.3 Resolution of a Telescope

Each of the two telescopes at the Keck Observatory on the dormant Mauna Kea volcano in Hawaii has an effective diameter of 10 m. What is its limiting angle of resolution for 600-nm light?

SOLUTION

Conceptualize Identify the aperture through which the light travels as the opening of the telescope. Light passing through this aperture causes diffraction patterns to occur in the final image.

Categorize We determine the result using equations developed in this section, so we categorize this example as a substitution problem.

Use Equation 38.6, taking $\lambda = 6.00 \times 10^{-7} \text{ m}$ and $D = 10 \text{ m}$:

$$\begin{aligned}\theta_{\min} &= 1.22 \frac{\lambda}{D} = 1.22 \left(\frac{6.00 \times 10^{-7} \text{ m}}{10 \text{ m}} \right) \\ &= 7.3 \times 10^{-8} \text{ rad} \approx 0.015 \text{ s of arc}\end{aligned}$$

Any two stars that subtend an angle greater than or equal to this value are resolved (if atmospheric conditions are ideal).

WHAT IF? What if we consider radio telescopes? They are much larger in diameter than optical telescopes, but do they have better angular resolutions than optical telescopes? For example, the radio telescope at Arecibo, Puerto Rico, has a diameter of 305 m and is designed to detect radio waves of 0.75-m wavelength. How does its resolution compare with that of one of the Keck telescopes?

Answer The increase in diameter might suggest that radio telescopes would have better resolution than a Keck telescope, but Equation 38.6 shows that θ_{\min} depends on *both* diameter and wavelength. Calculating the minimum angle of resolution for the radio telescope, we find

$$\begin{aligned}\theta_{\min} &= 1.22 \frac{\lambda}{D} = 1.22 \left(\frac{0.75 \text{ m}}{305 \text{ m}} \right) \\ &= 3.0 \times 10^{-3} \text{ rad} \approx 10 \text{ min of arc}\end{aligned}$$

This limiting angle of resolution is measured in *minutes* of arc rather than the *seconds* of arc for the optical telescope. Therefore, the change in wavelength more than compensates for the increase in diameter. The limiting angle of resolution for the Arecibo radio telescope is more than 40 000 times larger (that is, *worse*) than the Keck minimum.




Figure 38.11 (a) The photograph on which Charon, the moon of Pluto, was discovered in 1978. From an Earth-based telescope, atmospheric blurring results in Charon appearing only as a subtle bump on the edge of Pluto. (b) A Hubble Space Telescope photo of Pluto and Charon, clearly resolving the two objects.

A telescope such as the one discussed in Example 38.3 can never reach its diffraction limit because the limiting angle of resolution is always set by atmospheric blurring at optical wavelengths. This seeing limit is usually about 1 s of arc and is never smaller than about 0.1 s of arc. The atmospheric blurring is caused by variations in index of refraction with temperature variations in the air. This blurring is one reason for the superiority of photographs from orbiting telescopes, which view celestial objects from a position above the atmosphere.

As an example of the effects of atmospheric blurring, consider telescopic images of Pluto and its moon, Charon. Figure 38.11a, an image taken in 1978, represents the discovery of Charon. In this photograph, taken from an Earth-based telescope, atmospheric turbulence causes the image of Charon to appear only as a bump on the edge of Pluto. In comparison, Figure 38.11b shows a photograph taken from the Hubble Space Telescope. Without the problems of atmospheric turbulence, Pluto and its moon are clearly resolved.

38.4 The Diffraction Grating

The **diffraction grating**, a useful device for analyzing light sources, consists of a large number of equally spaced parallel slits. A *transmission grating* can be made by cutting parallel grooves on a glass plate with a precision ruling machine. The spaces between the grooves are transparent to the light and hence act as separate slits. A *reflection grating* can be made by cutting parallel grooves on the surface of a reflective material. The reflection of light from the spaces between the grooves is specular, and the reflection from the grooves cut into the material is diffuse. Therefore, the spaces between the grooves act as parallel sources of reflected light like the slits in a transmission grating. Current technology can produce gratings that have very small slit spacings. For example, a typical grating ruled with 5 000 grooves/cm has a slit spacing $d = (1/5\,000)\text{ cm} = 2.00 \times 10^{-4}\text{ cm}$.

A section of a diffraction grating is illustrated in Figure 38.12 (page 1170). A plane wave is incident from the left, normal to the plane of the grating. The pattern observed on the screen far to the right of the grating is the result of the combined effects of interference and diffraction. Each slit produces diffraction, and the diffracted beams interfere with one another to produce the final pattern.

The waves from all slits are in phase as they leave the slits. For an arbitrary direction θ measured from the horizontal, however, the waves must travel different path lengths before reaching the screen. Notice in Figure 38.12 that the path difference δ between rays from any two adjacent slits is equal to $d \sin \theta$. If this path difference equals one wavelength or some integral multiple of a wavelength, waves from all slits are in phase at the screen and a bright fringe is observed. Therefore, the condition for *maxima* in the interference pattern at the angle θ_{bright} is

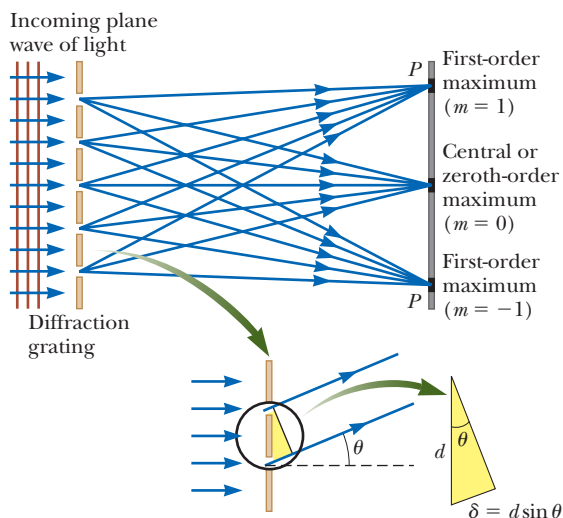
$$d \sin \theta_{\text{bright}} = m\lambda \quad m = 0, \pm 1, \pm 2, \pm 3, \dots \quad (38.7)$$

Pitfall Prevention 38.3

A Diffraction Grating Is an Interference Grating As with *diffraction pattern*, *diffraction grating* is a misnomer, but is deeply entrenched in the language of physics. The diffraction grating depends on diffraction in the same way as the double slit, spreading the light so that light from different slits can interfere. It would be more correct to call it an *interference grating*, but *diffraction grating* is the name in use.

◀ Condition for interference maxima for a grating

Figure 38.12 Side view of a diffraction grating. The slit separation is d , and the path difference between adjacent slits is $d \sin \theta$.



We can use this expression to calculate the wavelength if we know the grating spacing d and the angle θ_{bright} . If the incident radiation contains several wavelengths, the m th-order maximum for each wavelength occurs at a specific angle. All wavelengths are seen at $\theta = 0$, corresponding to $m = 0$, the zeroth-order maximum. The first-order maximum ($m = 1$) is observed at an angle that satisfies the relationship $\sin \theta_{\text{bright}} = \lambda/d$, the second-order maximum ($m = 2$) is observed at a larger angle θ_{bright} , and so on. For the small values of d typical in a diffraction grating, the angles θ_{bright} are large, as we see in Example 38.5.

The intensity distribution for a diffraction grating obtained with the use of a monochromatic source is shown in Figure 38.13. Notice the sharpness of the principal maxima and the broadness of the dark areas compared with the broad bright fringes characteristic of the two-slit interference pattern (see Fig. 37.6). You should also review Figure 37.7, which shows that the width of the intensity maxima decreases as the number of slits increases. Because the principal maxima are so sharp, they are much brighter than two-slit interference maxima.

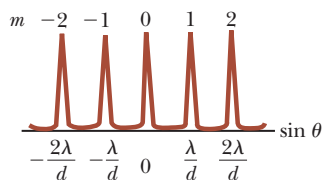


Figure 38.13 Intensity versus $\sin \theta$ for a diffraction grating. The zeroth-, first-, and second-order maxima are shown.

- Quick Quiz 38.5** Ultraviolet light of wavelength 350 nm is incident on a diffraction grating with slit spacing d and forms an interference pattern on a screen a distance L away. The angular positions θ_{bright} of the interference maxima are large. The locations of the bright fringes are marked on the screen. Now red light of wavelength 700 nm is used with a diffraction grating to form another diffraction pattern on the screen. Will the bright fringes of this pattern be located at the marks on the screen if (a) the screen is moved to a distance $2L$ from the grating, (b) the screen is moved to a distance $L/2$ from the grating, (c) the grating is replaced with one of slit spacing $2d$, (d) the grating is replaced with one of slit spacing $d/2$, or (e) nothing is changed?

Conceptual Example 38.4

A Compact Disc Is a Diffraction Grating

Light reflected from the surface of a compact disc is multicolored as shown in Figure 38.14. The colors and their intensities depend on the orientation of the CD relative to the eye and relative to the light source. Explain how that works.

SOLUTION

The surface of a CD has a spiral grooved track (with adjacent grooves having a separation on

Figure 38.14 (Conceptual Example 38.4) A compact disc observed under white light. The colors observed in the reflected light and their intensities depend on the orientation of the CD relative to the eye and relative to the light source.



► 38.4 continued

the order of $1\ \mu\text{m}$). Therefore, the surface acts as a reflection grating. The light reflecting from the regions between these closely spaced grooves interferes constructively only in certain directions that depend on the wavelength and the direction of the incident light. Any section of the CD serves as a diffraction grating for white light, sending different colors in different directions. The different colors you see upon viewing one section change when the light source, the CD, or you change position. This change in position causes the angle of incidence or the angle of the diffracted light to be altered.

Example 38.5 The Orders of a Diffraction Grating

Monochromatic light from a helium–neon laser ($\lambda = 632.8\ \text{nm}$) is incident normally on a diffraction grating containing 6 000 grooves per centimeter. Find the angles at which the first- and second-order maxima are observed.

SOLUTION

Conceptualize Study Figure 38.12 and imagine that the light coming from the left originates from the helium–neon laser. Let’s evaluate the possible values of the angle θ for constructive interference.

Categorize We determine results using equations developed in this section, so we categorize this example as a substitution problem.

Calculate the slit separation as the inverse of the number of grooves per centimeter:

$$d = \frac{1}{6\,000}\ \text{cm} = 1.667 \times 10^{-4}\ \text{cm} = 1\,667\ \text{nm}$$

Solve Equation 38.7 for $\sin \theta$ and substitute numerical values for the first-order maximum ($m = 1$) to find θ_1 :

$$\begin{aligned}\sin \theta_1 &= \frac{(1)\lambda}{d} = \frac{632.8\ \text{nm}}{1\,667\ \text{nm}} = 0.379\,7 \\ \theta_1 &= 22.31^\circ\end{aligned}$$

Repeat for the second-order maximum ($m = 2$):

$$\begin{aligned}\sin \theta_2 &= \frac{(2)\lambda}{d} = \frac{2(632.8\ \text{nm})}{1\,667\ \text{nm}} = 0.759\,4 \\ \theta_2 &= 49.41^\circ\end{aligned}$$

WHAT IF? What if you looked for the third-order maximum? Would you find it?

Answer For $m = 3$, we find $\sin \theta_3 = 1.139$. Because $\sin \theta$ cannot exceed unity, this result does not represent a realistic solution. Hence, only zeroth-, first-, and second-order maxima can be observed for this situation.

Applications of Diffraction Gratings

A schematic drawing of a simple apparatus used to measure angles in a diffraction pattern is shown in Figure 38.15 (page 1172). This apparatus is a *diffraction grating spectrometer*. The light to be analyzed passes through a slit, and a collimated beam of light is incident on the grating. The diffracted light leaves the grating at angles that satisfy Equation 38.7, and a telescope is used to view the image of the slit. The wavelength can be determined by measuring the precise angles at which the images of the slit appear for the various orders.

The spectrometer is a useful tool in *atomic spectroscopy*, in which the light from an atom is analyzed to find the wavelength components. These wavelength components can be used to identify the atom. We shall investigate atomic spectra in Chapter 42 of the extended version of this text.

Another application of diffraction gratings is the *grating light valve* (GLV), which competes in some video display applications with the digital micromirror devices (DMDs) discussed in Section 35.4. A GLV is a silicon microchip fitted with an array

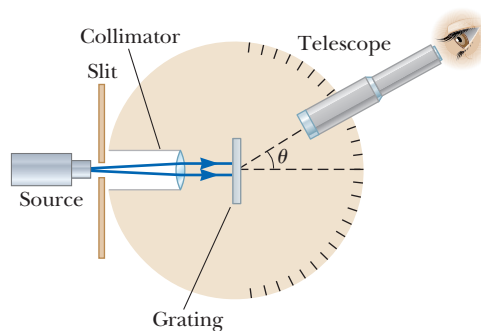


Figure 38.15 Diagram of a diffraction grating spectrometer. The collimated beam incident on the grating is spread into its various wavelength components with constructive interference for a particular wavelength occurring at the angles θ_{bright} that satisfy the equation $d \sin \theta_{\text{bright}} = m\lambda$, where $m = 0, \pm 1, \pm 2, \dots$




Figure 38.16 A small portion of a grating light valve. The alternating reflective ribbons at different levels act as a diffraction grating, offering very high-speed control of the direction of light toward a digital display device.

of parallel silicon nitride ribbons coated with a thin layer of aluminum (Fig. 38.16). Each ribbon is approximately $20 \mu\text{m}$ long and $5 \mu\text{m}$ wide and is separated from the silicon substrate by an air gap on the order of 100 nm . With no voltage applied, all ribbons are at the same level. In this situation, the array of ribbons acts as a flat surface, specularly reflecting incident light.

When a voltage is applied between a ribbon and the electrode on the silicon substrate, an electric force pulls the ribbon downward, closer to the substrate. Alternate ribbons can be pulled down, while those in between remain in an elevated configuration. As a result, the array of ribbons acts as a diffraction grating such that the constructive interference for a particular wavelength of light can be directed toward a screen or other optical display system. If one uses three such devices—one each for red, blue, and green light—full-color display is possible.


In addition to its use in video display, the GLV has found applications in laser optical navigation sensor technology, computer-to-plate commercial printing, and other types of imaging.

Another interesting application of diffraction gratings is **holography**, the production of three-dimensional images of objects. The physics of holography was developed by Dennis Gabor (1900–1979) in 1948 and resulted in the Nobel Prize in Physics for Gabor in 1971. The requirement of coherent light for holography delayed the realization of holographic images from Gabor's work until the development of lasers in the 1960s. Figure 38.17 shows a single hologram viewed from two different positions and the three-dimensional character of its image. Notice in particular the difference in the view through the magnifying glass in Figures 38.17a and 38.17b.


Figure 38.18 shows how a hologram is made. Light from the laser is split into two parts by a half-silvered mirror at B . One part of the beam reflects off the object to be photographed and strikes an ordinary photographic film. The other half of the beam is diverged by lens L_2 , reflects from mirrors M_1 and M_2 , and finally

Figure 38.17 In this hologram, a circuit board is shown from two different views. Notice the difference in the appearance of the measuring tape and the view through the magnifying lens in (a) and (b).

Photo by Ronald R. Erickson; hologram by Nicklaus Phillips



a



b

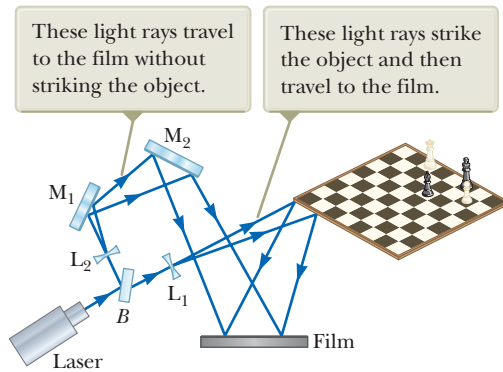


Figure 38.18 Experimental arrangement for producing a hologram.

strikes the film. The two beams overlap to form an extremely complicated interference pattern on the film. Such an interference pattern can be produced only if the phase relationship of the two waves is constant throughout the exposure of the film. This condition is met by illuminating the scene with light coming through a pinhole or with coherent laser radiation. The hologram records not only the intensity of the light scattered from the object (as in a conventional photograph), but also the phase difference between the reference beam and the beam scattered from the object. Because of this phase difference, an interference pattern is formed that produces an image in which all three-dimensional information available from the perspective of any point on the hologram is preserved.

In a normal photographic image, a lens is used to focus the image so that each point on the object corresponds to a single point on the photograph. Notice that there is no lens used in Figure 38.18 to focus the light onto the film. Therefore, light from each point on the object reaches *all* points on the film. As a result, each region of the photographic film on which the hologram is recorded contains information about all illuminated points on the object, which leads to a remarkable result: if a small section of the hologram is cut from the film, the complete image can be formed from the small piece! (The quality of the image is reduced, but the entire image is present.)

A hologram is best viewed by allowing coherent light to pass through the developed film as one looks back along the direction from which the beam comes. The interference pattern on the film acts as a diffraction grating. Figure 38.19 shows two rays of light striking and passing through the film. For each ray, the $m = 0$ and $m = \pm 1$ rays in the diffraction pattern are shown emerging from the right side of the film. The $m = +1$ rays converge to form a real image of the scene, which is not the image that is normally viewed. By extending the light rays corresponding to $m = -1$ behind the film, we see that there is a virtual image located there, with light coming from it in exactly the same way that light came from the actual object

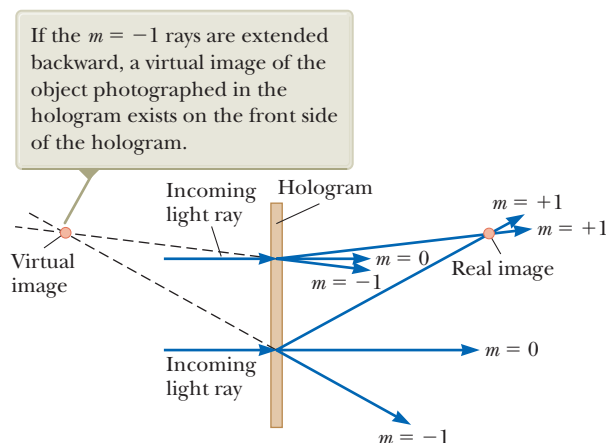
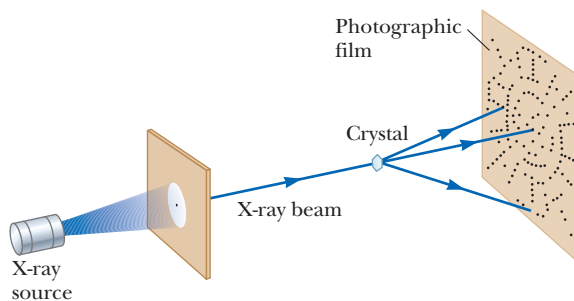


Figure 38.19 Two light rays strike a hologram at normal incidence. For each ray, outgoing rays corresponding to $m = 0$ and $m = \pm 1$ are shown.

Figure 38.20 Schematic diagram of the technique used to observe the diffraction of x-rays by a crystal. The array of spots formed on the film is called a Laue pattern.



when the film was exposed. This image is what one sees when looking through the holographic film.

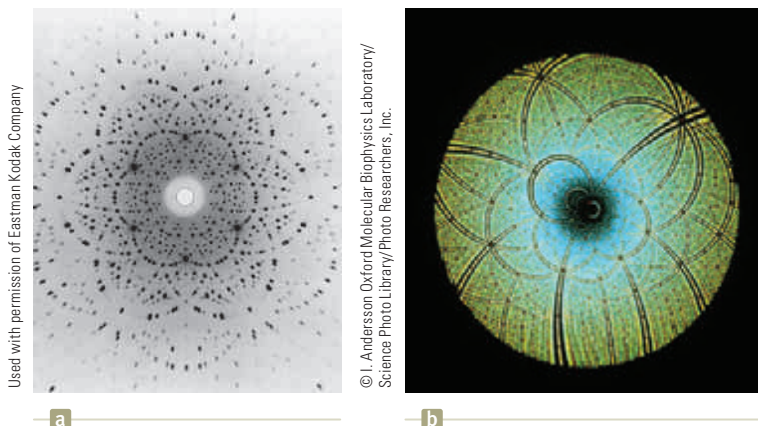
Holograms are finding a number of applications. You may have a hologram on your credit card. This special type of hologram is called a *rainbow hologram* and is designed to be viewed in reflected white light.

38.5 Diffraction of X-Rays by Crystals

In principle, the wavelength of any electromagnetic wave can be determined if a grating of the proper spacing (on the order of λ) is available. X-rays, discovered by Wilhelm Roentgen (1845–1923) in 1895, are electromagnetic waves of very short wavelength (on the order of 0.1 nm). It would be impossible to construct a grating having such a small spacing by the cutting process described at the beginning of Section 38.4. The atomic spacing in a solid is known to be about 0.1 nm, however. In 1913, Max von Laue (1879–1960) suggested that the regular array of atoms in a crystal could act as a three-dimensional diffraction grating for x-rays. Subsequent experiments confirmed this prediction. The diffraction patterns from crystals are complex because of the three-dimensional nature of the crystal structure. Nevertheless, x-ray diffraction has proved to be an invaluable technique for elucidating these structures and for understanding the structure of matter.

Figure 38.20 shows one experimental arrangement for observing x-ray diffraction from a crystal. A collimated beam of monochromatic x-rays is incident on a crystal. The diffracted beams are very intense in certain directions, corresponding to constructive interference from waves reflected from layers of atoms in the crystal. The diffracted beams, which can be detected by a photographic film, form an array of spots known as a *Laue pattern* as in Figure 38.21a. One can deduce the crystalline structure by analyzing the positions and intensities of the various spots in the pattern. Figure 38.21b shows a Laue pattern from a crystalline enzyme, using a wide range of wavelengths so that a swirling pattern results.

Figure 38.21 (a) A Laue pattern of a single crystal of the mineral beryl (beryllium aluminum silicate). Each dot represents a point of constructive interference. (b) A Laue pattern of the enzyme Rubisco, produced with a wide-band x-ray spectrum. This enzyme is present in plants and takes part in the process of photosynthesis. The Laue pattern is used to determine the crystal structure of Rubisco.



Used with permission of Eastman Kodak Company

© I. Andersson Oxford Molecular Biophysics Laboratory/ Science Photo Library/Photo Researchers, Inc.

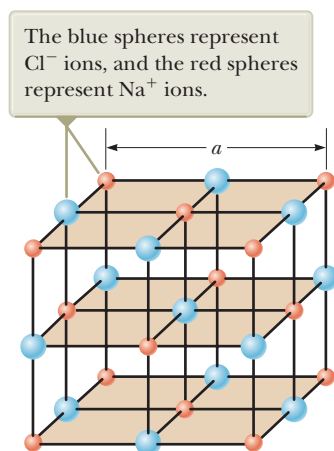


Figure 38.22 Crystalline structure of sodium chloride (NaCl). The length of the cube edge is $a = 0.562\,737\text{ nm}$.

The arrangement of atoms in a crystal of sodium chloride (NaCl) is shown in Figure 38.22. Each unit cell (the geometric solid that repeats throughout the crystal) is a cube having an edge length a . A careful examination of the NaCl structure shows that the ions lie in discrete planes (the shaded areas in Fig. 38.22). Now suppose an incident x-ray beam makes an angle θ with one of the planes as in Figure 38.23. The beam can be reflected from both the upper plane and the lower one, but the beam reflected from the lower plane travels farther than the beam reflected from the upper plane. The effective path difference is $2d \sin \theta$. The two beams reinforce each other (constructive interference) when this path difference equals some integer multiple of λ . The same is true for reflection from the entire family of parallel planes. Hence, the condition for *constructive* interference (maxima in the reflected beam) is

$$2d \sin \theta = m\lambda \quad m = 1, 2, 3, \dots \quad (38.8)$$

This condition is known as **Bragg's law**, after W. L. Bragg (1890–1971), who first derived the relationship. If the wavelength and diffraction angle are measured, Equation 38.8 can be used to calculate the spacing between atomic planes.

38.6 Polarization of Light Waves

In Chapter 34, we described the transverse nature of light and all other electromagnetic waves. Polarization, discussed in this section, is firm evidence of this transverse nature.

An ordinary beam of light consists of a large number of waves emitted by the atoms of the light source. Each atom produces a wave having some particular orientation of the electric field vector \vec{E} , corresponding to the direction of atomic vibration. The *direction of polarization* of each individual wave is defined to be the direction in which the electric field is vibrating. In Figure 38.24, this direction happens to lie along the y axis. All individual electromagnetic waves traveling in the x direction have an \vec{E} vector parallel to the yz plane, but this vector could be at any possible angle with respect to the y axis. Because all directions of vibration from a wave source are possible, the resultant electromagnetic wave is a superposition of waves vibrating in many different directions. The result is an **unpolarized** light beam, represented in Figure 38.25a (page 1176). The direction of wave propagation in this figure is perpendicular to the page. The arrows show a few possible

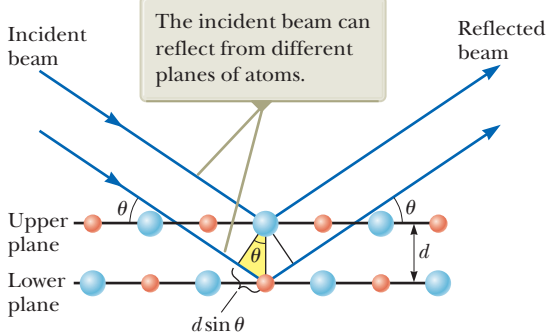


Figure 38.23 A two-dimensional description of the reflection of an x-ray beam from two parallel crystalline planes separated by a distance d . The beam reflected from the lower plane travels farther than the beam reflected from the upper plane by a distance $2d \sin \theta$.

Pitfall Prevention 38.4

Different Angles Notice in Figure 38.23 that the angle θ is measured from the reflecting surface rather than from the normal as in the case of the law of reflection in Chapter 35. With slits and diffraction gratings, we also measured the angle θ from the normal to the array of slits. Because of historical tradition, the angle is measured differently in Bragg diffraction, so interpret Equation 38.8 with care.

◀ Bragg's law

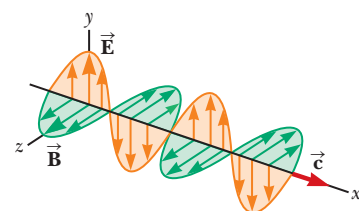


Figure 38.24 Schematic diagram of an electromagnetic wave propagating at velocity \vec{c} in the x direction. The electric field vibrates in the xy plane, and the magnetic field vibrates in the xz plane.

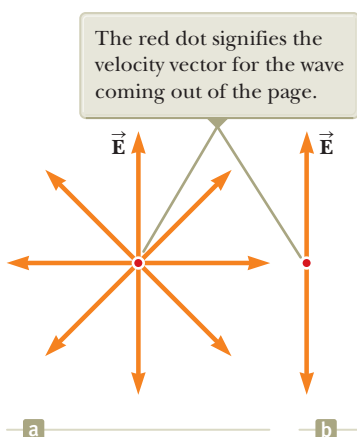


Figure 38.25 (a) A representation of an unpolarized light beam viewed along the direction of propagation. The transverse electric field can vibrate in any direction in the plane of the page with equal probability. (b) A linearly polarized light beam with the electric field vibrating in the vertical direction.

directions of the electric field vectors for the individual waves making up the resultant beam. At any given point and at some instant of time, all these individual electric field vectors add to give one resultant electric field vector.

As noted in Section 34.3, a wave is said to be **linearly polarized** if the resultant electric field \vec{E} vibrates in the same direction *at all times* at a particular point as shown in Figure 38.25b. (Sometimes, such a wave is described as *plane-polarized*, or simply *polarized*.) The plane formed by \vec{E} and the direction of propagation is called the *plane of polarization* of the wave. If the wave in Figure 38.24 represents the resultant of all individual waves, the plane of polarization is the xy plane.

A linearly polarized beam can be obtained from an unpolarized beam by removing all waves from the beam except those whose electric field vectors oscillate in a single plane. We now discuss four processes for producing polarized light from unpolarized light.

Polarization by Selective Absorption

The most common technique for producing polarized light is to use a material that transmits waves whose electric fields vibrate in a plane parallel to a certain direction and that absorbs waves whose electric fields vibrate in all other directions.

In 1938, E. H. Land (1909–1991) discovered a material, which he called *Polaroid*, that polarizes light through selective absorption. This material is fabricated in thin sheets of long-chain hydrocarbons. The sheets are stretched during manufacture so that the long-chain molecules align. After a sheet is dipped into a solution containing iodine, the molecules become good electrical conductors. Conduction takes place primarily along the hydrocarbon chains because electrons can move easily only along the chains. If light whose electric field vector is parallel to the chains is incident on the material, the electric field accelerates electrons along the chains and energy is absorbed from the radiation. Therefore, the light does not pass through the material. Light whose electric field vector is perpendicular to the chains passes through the material because electrons cannot move from one molecule to the next. As a result, when unpolarized light is incident on the material, the exiting light is polarized perpendicular to the molecular chains.

It is common to refer to the direction perpendicular to the molecular chains as the *transmission axis*. In an ideal polarizer, all light with \vec{E} parallel to the transmission axis is transmitted and all light with \vec{E} perpendicular to the transmission axis is absorbed.

Figure 38.26 represents an unpolarized light beam incident on a first polarizing sheet, called the *polarizer*. Because the transmission axis is oriented vertically in the figure, the light transmitted through this sheet is polarized vertically. A second polarizing sheet, called the *analyzer*, intercepts the beam. In Figure 38.26, the analyzer transmission axis is set at an angle θ to the polarizer axis. We call the electric field vector of the first transmitted beam \vec{E}_0 . The component of \vec{E}_0 perpendicular to the analyzer axis is completely absorbed. The component of \vec{E}_0 parallel to the

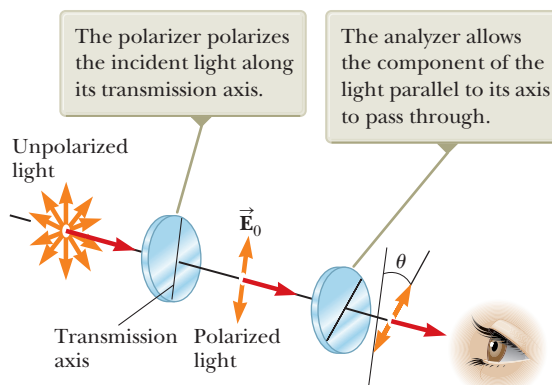


Figure 38.26 Two polarizing sheets whose transmission axes make an angle θ with each other. Only a fraction of the polarized light incident on the analyzer is transmitted through it.

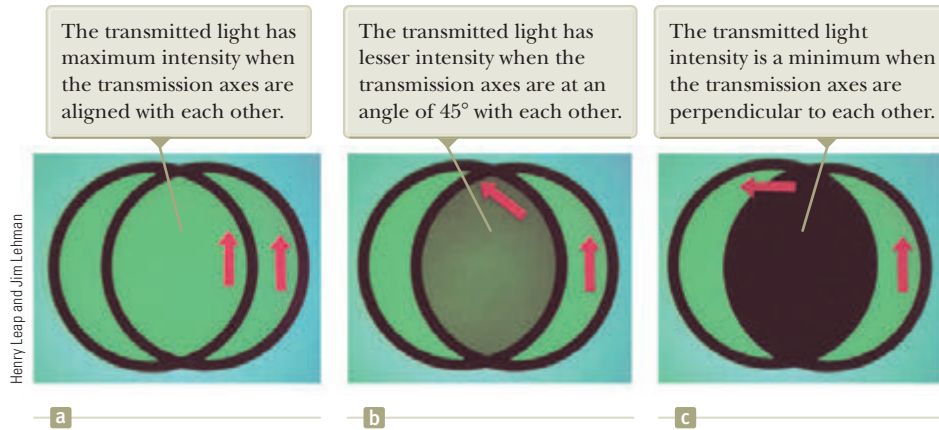


Figure 38.27 The intensity of light transmitted through two polarizers depends on the relative orientation of their transmission axes. The red arrows indicate the transmission axes of the polarizers.

analyzer axis, which is transmitted through the analyzer, is $E_0 \cos \theta$. Because the intensity of the transmitted beam varies as the square of its magnitude, we conclude that the intensity I of the (polarized) beam transmitted through the analyzer varies as

$$I = I_{\max} \cos^2 \theta \quad (38.9)$$

◀ Malus's law

where I_{\max} is the intensity of the polarized beam incident on the analyzer. This expression, known as **Malus's law**,² applies to any two polarizing materials whose transmission axes are at an angle θ to each other. This expression shows that the intensity of the transmitted beam is maximum when the transmission axes are parallel ($\theta = 0$ or 180°) and is zero (complete absorption by the analyzer) when the transmission axes are perpendicular to each other. This variation in transmitted intensity through a pair of polarizing sheets is illustrated in Figure 38.27. Because the average value of $\cos^2 \theta$ is $\frac{1}{2}$, the intensity of initially unpolarized light is reduced by a factor of one-half as the light passes through a single ideal polarizer.

Polarization by Reflection

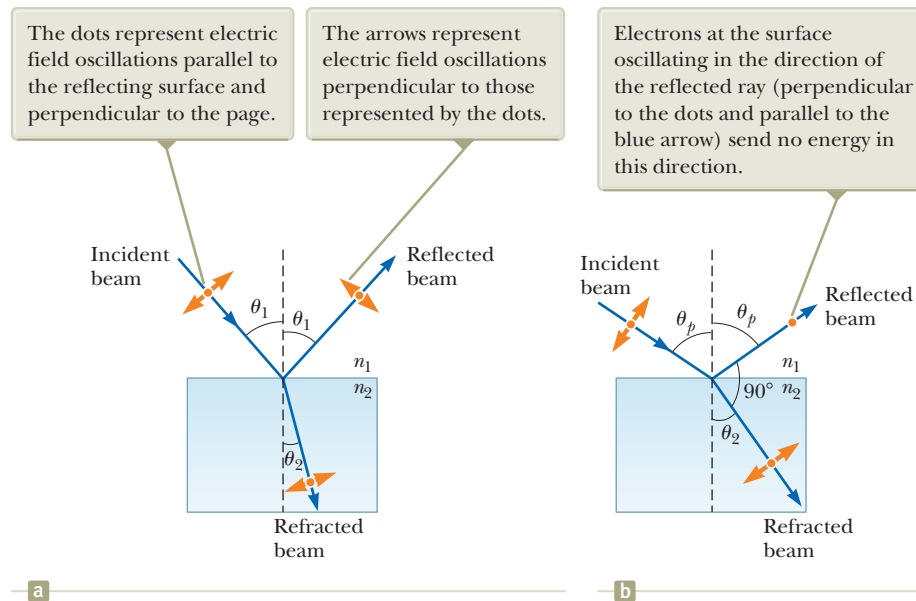
When an unpolarized light beam is reflected from a surface, the polarization of the reflected light depends on the angle of incidence. If the angle of incidence is 0° , the reflected beam is unpolarized. For other angles of incidence, the reflected light is polarized to some extent, and for one particular angle of incidence, the reflected light is completely polarized. Let's now investigate reflection at that special angle.

Suppose an unpolarized light beam is incident on a surface as in Figure 38.28a (page 1178). Each individual electric field vector can be resolved into two components: one parallel to the surface (and perpendicular to the page in Fig. 38.28, represented by the dots) and the other (represented by the orange arrows) perpendicular both to the first component and to the direction of propagation. Therefore, the polarization of the entire beam can be described by two electric field components in these directions. It is found that the parallel component represented by the dots reflects more strongly than the other component represented by the arrows, resulting in a partially polarized reflected beam. Furthermore, the refracted beam is also partially polarized.

Now suppose the angle of incidence θ_1 is varied until the angle between the reflected and refracted beams is 90° as in Figure 38.28b. At this particular angle of incidence, the reflected beam is completely polarized (with its electric field vector parallel to the surface) and the refracted beam is still only partially polarized. The angle of incidence at which this polarization occurs is called the **polarizing angle** θ_p .

²Named after its discoverer, E. L. Malus (1775–1812). Malus discovered that reflected light was polarized by viewing it through a calcite (CaCO_3) crystal.

Figure 38.28 (a) When unpolarized light is incident on a reflecting surface, the reflected and refracted beams are partially polarized. (b) The reflected beam is completely polarized when the angle of incidence equals the polarizing angle θ_p , which satisfies the equation $n_2/n_1 = \tan \theta_p$. At this incident angle, the reflected and refracted rays are perpendicular to each other.



We can obtain an expression relating the polarizing angle to the index of refraction of the reflecting substance by using Figure 38.28b. From this figure, we see that $\theta_p + 90^\circ + \theta_2 = 180^\circ$; therefore, $\theta_2 = 90^\circ - \theta_p$. Using Snell's law of refraction (Eq. 35.8) gives

$$\frac{n_2}{n_1} = \frac{\sin \theta_1}{\sin \theta_2} = \frac{\sin \theta_p}{\sin \theta_2}$$

Because $\sin \theta_2 = \sin (90^\circ - \theta_p) = \cos \theta_p$, we can write this expression as $n_2/n_1 = \sin \theta_p/\cos \theta_p$, which means that

Brewster's law ▶

$$\tan \theta_p = \frac{n_2}{n_1} \quad (38.10)$$

This expression is called **Brewster's law**, and the polarizing angle θ_p is sometimes called **Brewster's angle**, after its discoverer, David Brewster (1781–1868). Because n varies with wavelength for a given substance, Brewster's angle is also a function of wavelength.

We can understand polarization by reflection by imagining that the electric field in the incident light sets electrons at the surface of the material in Figure 38.28b into oscillation. The component directions of oscillation are (1) parallel to the arrows shown on the refracted beam of light and therefore parallel to the reflected beam and (2) perpendicular to the page. The oscillating electrons act as dipole antennas radiating light with a polarization parallel to the direction of oscillation. Consult Figure 34.12, which shows the pattern of radiation from a dipole antenna. Notice that there is no radiation at an angle of $\theta = 0$, that is, along the oscillation direction of the antenna. Therefore, for the oscillations in direction 1, there is no radiation in the direction along the reflected ray. For oscillations in direction 2, the electrons radiate light with a polarization perpendicular to the page. Therefore, the light reflected from the surface at this angle is completely polarized parallel to the surface.

Polarization by reflection is a common phenomenon. Sunlight reflected from water, glass, and snow is partially polarized. If the surface is horizontal, the electric field vector of the reflected light has a strong horizontal component. Sunglasses made of polarizing material reduce the glare of reflected light. The transmission axes of such lenses are oriented vertically so that they absorb the strong horizontal component of the reflected light. If you rotate sunglasses through 90° , they are not as effective at blocking the glare from shiny horizontal surfaces.

Polarization by Double Refraction

Solids can be classified on the basis of internal structure. Those in which the atoms are arranged in a specific order are called *crystalline*; the NaCl structure of Figure 38.22 is one example of a crystalline solid. Those solids in which the atoms are distributed randomly are called *amorphous*. When light travels through an amorphous material such as glass, it travels with a speed that is the same in all directions. That is, glass has a single index of refraction. In certain crystalline materials such as calcite and quartz, however, the speed of light is not the same in all directions. In these materials, the speed of light depends on the direction of propagation *and* on the plane of polarization of the light. Such materials are characterized by two indices of refraction. Hence, they are often referred to as **double-refracting** or **birefringent** materials.

When unpolarized light enters a birefringent material, it may split into an **ordinary (O) ray** and an **extraordinary (E) ray**. These two rays have mutually perpendicular polarizations and travel at different speeds through the material. The two speeds correspond to two indices of refraction, n_O for the ordinary ray and n_E for the extraordinary ray.

There is one direction, called the **optic axis**, along which the ordinary and extraordinary rays have the same speed. If light enters a birefringent material at an angle to the optic axis, however, the different indices of refraction will cause the two polarized rays to split and travel in different directions as shown in Figure 38.29.

The index of refraction n_O for the ordinary ray is the same in all directions. If one could place a point source of light inside the crystal as in Figure 38.30, the ordinary waves would spread out from the source as spheres. The index of refraction n_E varies with the direction of propagation. A point source sends out an extraordinary wave having wave fronts that are elliptical in cross section. The difference in speed for the two rays is a maximum in the direction perpendicular to the optic axis. For example, in calcite, $n_O = 1.658$ at a wavelength of 589.3 nm and n_E varies from 1.658 along the optic axis to 1.486 perpendicular to the optic axis. Values for n_O and the extreme value of n_E for various double-refracting crystals are given in Table 38.1.

If you place a calcite crystal on a sheet of paper and then look through the crystal at any writing on the paper, you would see two images as shown in Figure 38.31. As can be seen from Figure 38.29, these two images correspond to one formed by the ordinary ray and one formed by the extraordinary ray. If the two images are viewed through a sheet of rotating polarizing glass, they alternately appear and disappear because the ordinary and extraordinary rays are plane-polarized along mutually perpendicular directions.

Some materials such as glass and plastic become birefringent when stressed. Suppose an unstressed piece of plastic is placed between a polarizer and an analyzer so that light passes from polarizer to plastic to analyzer. When the plastic is unstressed and the analyzer axis is perpendicular to the polarizer axis, none of the polarized light passes through the analyzer. In other words, the unstressed plastic has no effect on the light passing through it. If the plastic is stressed, however, regions of greatest stress become birefringent and the polarization of the light passing through the plastic changes. Hence, a series of bright and dark bands is observed in the transmitted light, with the bright bands corresponding to regions of greatest stress.

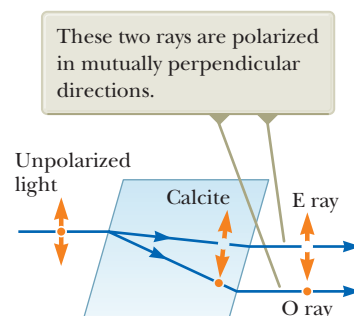


Figure 38.29 Unpolarized light incident at an angle to the optic axis in a calcite crystal splits into an ordinary (O) ray and an extraordinary (E) ray (not to scale).

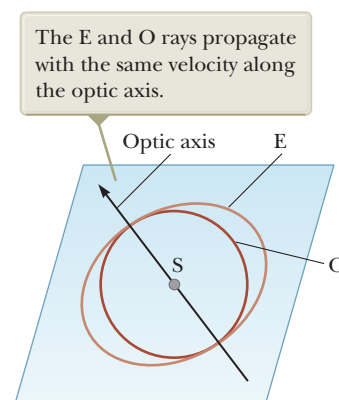


Figure 38.30 A point source S inside a double-refracting crystal produces a spherical wave front corresponding to the ordinary (O) ray and an elliptical wave front corresponding to the extraordinary (E) ray.




Figure 38.31 A calcite crystal produces a double image because it is a birefringent (double-refracting) material.

Table 38.1 Indices of Refraction for Some Double-Refraction Crystals at a Wavelength of 589.3 nm

Crystal	n_O	n_E	n_O/n_E
Calcite (CaCO_3)	1.658	1.486	1.116
Quartz (SiO_2)	1.544	1.553	0.994
Sodium nitrate (NaNO_3)	1.587	1.336	1.188
Sodium sulfite (NaSO_3)	1.565	1.515	1.033
Zinc chloride (ZnCl_2)	1.687	1.713	0.985
Zinc sulfide (ZnS)	2.356	2.378	0.991

Figure 38.32 A plastic model of an arch structure under load conditions. The pattern is produced when the plastic model is viewed between a polarizer and analyzer oriented perpendicular to each other. Such patterns are useful in the optimal design of architectural components.



Peter Arahamian/Science Photo Library, Photo Researchers, Inc.

Engineers often use this technique, called *optical stress analysis*, in designing structures ranging from bridges to small tools. They build a plastic model and analyze it under different load conditions to determine regions of potential weakness and failure under stress. An example of a plastic model under stress is shown in Figure 38.32.

Polarization by Scattering

When light is incident on any material, the electrons in the material can absorb and reradiate part of the light. Such absorption and reradiation of light by electrons in the gas molecules that make up air is what causes sunlight reaching an observer on the Earth to be partially polarized. You can observe this effect—called **scattering**—by looking directly up at the sky through a pair of sunglasses whose lenses are made of polarizing material. Less light passes through at certain orientations of the lenses than at others.

Figure 38.33 illustrates how sunlight becomes polarized when it is scattered. The phenomenon is similar to that creating completely polarized light upon reflection from a surface at Brewster's angle. An unpolarized beam of sunlight traveling in the horizontal direction (parallel to the ground) strikes a molecule of one of the gases that make up air, setting the electrons of the molecule into vibration. These vibrating charges act like the vibrating charges in an antenna. The horizontal component of the electric field vector in the incident wave results in a horizontal component of the vibration of the charges, and the vertical component of the vector results in a vertical component of vibration. If the observer in Figure 38.33 is looking straight up (perpendicular to the original direction of propagation of the light), the vertical oscillations of the charges send no radiation toward the observer. Therefore, the observer sees light that is completely polarized in the horizontal direction as indicated by the orange arrows. If the observer looks in other directions, the light is partially polarized in the horizontal direction.

Variations in the color of scattered light in the atmosphere can be understood as follows. When light of various wavelengths λ is incident on gas molecules of diameter d , where $d \ll \lambda$, the relative intensity of the scattered light varies as $1/\lambda^4$. The condition $d \ll \lambda$ is satisfied for scattering from oxygen (O_2) and nitrogen (N_2) molecules in the atmosphere, whose diameters are about 0.2 nm. Hence, short wavelengths (violet light) are scattered more efficiently than long wavelengths (red light). Therefore, when sunlight is scattered by gas molecules in the air, the short-wavelength radiation (violet) is scattered more intensely than the long-wavelength radiation (red).

When you look up into the sky in a direction that is not toward the Sun, you see the scattered light, which is predominantly violet. Your eyes, however, are not very sensitive to violet light. Light of the next color in the spectrum, blue, is scattered with less intensity than violet, but your eyes are far more sensitive to blue light than to violet light. Hence, you see a blue sky. If you look toward the west at sunset (or toward the east at sunrise), you are looking in a direction toward the Sun and are seeing light that has passed through a large distance of air. Most of the blue light has been scattered by the air between you and the Sun. The light that survives this

The scattered light traveling perpendicular to the incident light is plane-polarized because the vertical vibrations of the charges in the air molecule send no light in this direction.

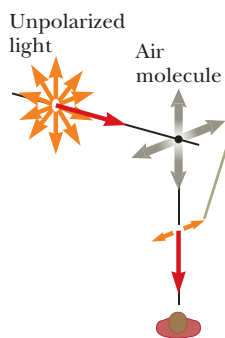


Figure 38.33 The scattering of unpolarized sunlight by air molecules.

trip through the air to you has had much of its blue component scattered and is therefore heavily weighted toward the red end of the spectrum; as a result, you see the red and orange colors of sunset (or sunrise).

Optical Activity

Many important applications of polarized light involve materials that display **optical activity**. A material is said to be optically active if it rotates the plane of polarization of any light transmitted through the material. The angle through which the light is rotated by a specific material depends on the length of the path through the material and on concentration if the material is in solution. One optically active material is a solution of the common sugar dextrose. A standard method for determining the concentration of sugar solutions is to measure the rotation produced by a fixed length of the solution.

Molecular asymmetry determines whether a material is optically active. For example, some proteins are optically active because of their spiral shape.

The liquid crystal displays found in most calculators have their optical activity changed by the application of electric potential across different parts of the display. Try using a pair of polarizing sunglasses to investigate the polarization used in the display of your calculator.

Quick Quiz 38.6 A polarizer for microwaves can be made as a grid of parallel metal wires approximately 1 cm apart. Is the electric field vector for microwaves transmitted through this polarizer (a) parallel or (b) perpendicular to the metal wires?

Quick Quiz 38.7 You are walking down a long hallway that has many light fixtures in the ceiling and a very shiny, newly waxed floor. When looking at the floor, you see reflections of every light fixture. Now you put on sunglasses that are polarized. Some of the reflections of the light fixtures can no longer be seen. (Try it!) Are the reflections that disappear those (a) nearest to you, (b) farthest from you, or (c) at an intermediate distance from you?

Summary

Concepts and Principles

Diffraction is the deviation of light from a straight-line path when the light passes through an aperture or around an obstacle. Diffraction is due to the wave nature of light.

The **Fraunhofer diffraction pattern** produced by a single slit of width a on a distant screen consists of a central bright fringe and alternating bright and dark fringes of much lower intensities. The angles θ_{dark} at which the diffraction pattern has zero intensity, corresponding to destructive interference, are given by

$$\sin \theta_{\text{dark}} = m \frac{\lambda}{a} \quad m = \pm 1, \pm 2, \pm 3, \dots \quad (38.1)$$

Rayleigh's criterion, which is a limiting condition of resolution, states that two images formed by an aperture are just distinguishable if the central maximum of the diffraction pattern for one image falls on the first minimum of the diffraction pattern for the other image. The limiting angle of resolution for a slit of width a is $\theta_{\text{min}} = \lambda/a$, and the limiting angle of resolution for a circular aperture of diameter D is given by $\theta_{\text{min}} = 1.22\lambda/D$.

A **diffraction grating** consists of a large number of equally spaced, identical slits. The condition for intensity maxima in the interference pattern of a diffraction grating for normal incidence is

$$d \sin \theta_{\text{bright}} = m\lambda \quad m = 0, \pm 1, \pm 2, \pm 3, \dots \quad (38.7)$$

where d is the spacing between adjacent slits and m is the order number of the intensity maximum.

continued

When polarized light of intensity I_{\max} is emitted by a polarizer and then is incident on an analyzer, the light transmitted through the analyzer has an intensity equal to $I_{\max} \cos^2 \theta$, where θ is the angle between the polarizer and analyzer transmission axes.

In general, reflected light is partially polarized. Reflected light, however, is completely polarized when the angle of incidence is such that the angle between the reflected and refracted beams is 90° . This angle of incidence, called the **polarizing angle** θ_p , satisfies **Brewster's law**:

$$\tan \theta_p = \frac{n_2}{n_1} \quad (38.10)$$

where n_1 is the index of refraction of the medium in which the light initially travels and n_2 is the index of refraction of the reflecting medium.

Objective Questions

1. denotes answer available in *Student Solutions Manual/Study Guide*

- Certain sunglasses use a polarizing material to reduce the intensity of light reflected as glare from water or automobile windshields. What orientation should the polarizing filters have to be most effective? (a) The polarizers should absorb light with its electric field horizontal. (b) The polarizers should absorb light with its electric field vertical. (c) The polarizers should absorb both horizontal and vertical electric fields. (d) The polarizers should not absorb either horizontal or vertical electric fields.
- What is most likely to happen to a beam of light when it reflects from a shiny metallic surface at an arbitrary angle? Choose the best answer. (a) It is totally absorbed by the surface. (b) It is totally polarized. (c) It is unpolarized. (d) It is partially polarized. (e) More information is required.
- In Figure 38.4, assume the slit is in a barrier that is opaque to x-rays as well as to visible light. The photograph in Figure 38.4b shows the diffraction pattern produced with visible light. What will happen if the experiment is repeated with x-rays as the incoming wave and with no other changes? (a) The diffraction pattern is similar. (b) There is no noticeable diffraction pattern but rather a projected shadow of high intensity on the screen, having the same width as the slit. (c) The central maximum is much wider, and the minima occur at larger angles than with visible light. (d) No x-rays reach the screen.
- A Fraunhofer diffraction pattern is produced on a screen located 1.00 m from a single slit. If a light source of wavelength 5.00×10^{-7} m is used and the distance from the center of the central bright fringe to the first dark fringe is 5.00×10^{-3} m, what is the slit width? (a) 0.010 0 mm (b) 0.100 mm (c) 0.200 mm (d) 1.00 mm (e) 0.005 00 mm
- Consider a wave passing through a single slit. What happens to the width of the central maximum of its diffraction pattern as the slit is made half as wide? (a) It becomes one-fourth as wide. (b) It becomes one-half as wide. (c) Its width does not change. (d) It becomes twice as wide. (e) It becomes four times as wide.
- Assume Figure 38.1 was photographed with red light of a single wavelength λ_0 . The light passed through a single slit of width a and traveled distance L to the screen where the photograph was made. Consider the width of the central bright fringe, measured between the centers of the dark fringes on both sides of it. Rank from largest to smallest the widths of the central fringe in the following situations and note any cases of equality. (a) The experiment is performed as photographed. (b) The experiment is performed with light whose frequency is increased by 50%. (c) The experiment is performed with light whose wavelength is increased by 50%. (d) The experiment is performed with the original light and with a slit of width $2a$. (e) The experiment is performed with the original light and slit and with distance $2L$ to the screen.
- If plane polarized light is sent through two polarizers, the first at 45° to the original plane of polarization and the second at 90° to the original plane of polarization, what fraction of the original polarized intensity passes through the last polarizer? (a) 0 (b) $\frac{1}{4}$ (c) $\frac{1}{2}$ (d) $\frac{1}{8}$ (e) $\frac{1}{10}$
- Why is it advantageous to use a large-diameter objective lens in a telescope? (a) It diffracts the light more effectively than smaller-diameter objective lenses. (b) It increases its magnification. (c) It enables you to see more objects in the field of view. (d) It reflects unwanted wavelengths. (e) It increases its resolution.
- What combination of optical phenomena causes the bright colored patterns sometimes seen on wet streets covered with a layer of oil? Choose the best answer. (a) diffraction and polarization (b) interference and diffraction (c) polarization and reflection (d) refraction and diffraction (e) reflection and interference
- When you receive a chest x-ray at a hospital, the x-rays pass through a set of parallel ribs in your chest. Do your ribs act as a diffraction grating for x-rays? (a) Yes. They produce diffracted beams that can be observed separately. (b) Not to a measurable extent. The ribs are too far apart. (c) Essentially not. The ribs are too close together. (d) Essentially not. The ribs are too few in number. (e) Absolutely not. X-rays cannot diffract.
- When unpolarized light passes through a diffraction grating, does it become polarized? (a) No, it does not. (b) Yes, it does, with the transmission axis parallel to the slits or grooves in the grating. (c) Yes, it does, with the transmission axis perpendicular to the slits or grooves in the grating. (d) It possibly does because an electric field above some threshold is blocked out by the grating if the field is perpendicular to the slits.

12. Off in the distance, you see the headlights of a car, but they are indistinguishable from the single headlight of a motorcycle. Assume the car's headlights are now switched from low beam to high beam so that the light intensity you receive becomes three times

greater. What then happens to your ability to resolve the two light sources? (a) It increases by a factor of 9. (b) It increases by a factor of 3. (c) It remains the same. (d) It becomes one-third as good. (e) It becomes one-ninth as good.

Conceptual Questions

1. denotes answer available in *Student Solutions Manual/Study Guide*

- The atoms in a crystal lie in planes separated by a few tenths of a nanometer. Can they produce a diffraction pattern for visible light as they do for x-rays? Explain your answer with reference to Bragg's law.
- Holding your hand at arm's length, you can readily block sunlight from reaching your eyes. Why can you not block sound from reaching your ears this way?
- How could the index of refraction of a flat piece of opaque obsidian glass be determined?
- (a) Is light from the sky polarized? (b) Why is it that clouds seen through Polaroid glasses stand out in bold contrast to the sky?
- A laser beam is incident at a shallow angle on a horizontal machinist's ruler that has a finely calibrated scale. The engraved rulings on the scale give rise to a diffraction pattern on a vertical screen. Discuss how you can use this technique to obtain a measure of the wavelength of the laser light.
- If a coin is glued to a glass sheet and this arrangement is held in front of a laser beam, the projected shadow has diffraction rings around its edge and a bright spot in the center. How are these effects possible?
- Fingerprints left on a piece of glass such as a windowpane often show colored spectra like that from a diffraction grating. Why?
- A laser produces a beam a few millimeters wide, with uniform intensity across its width. A hair is stretched vertically across the front of the laser to cross the beam. (a) How is the diffraction pattern it produces on a distant screen related to that of a vertical slit equal in width to the hair? (b) How could you determine the width of the hair from measurements of its diffraction pattern?
- A radio station serves listeners in a city to the northeast of its broadcast site. It broadcasts from three adjacent towers on a mountain ridge, along a line running east to west, in what's called a *phased array*. Show that by introducing time delays among the signals the individual towers radiate, the station can maximize net

intensity in the direction toward the city (and in the opposite direction) and minimize the signal transmitted in other directions.

10. John William Strutt, Lord Rayleigh (1842–1919), invented an improved foghorn. To warn ships of a coastline, a foghorn should radiate sound in a wide horizontal sheet over the ocean's surface. It should not waste energy by broadcasting sound upward or downward. Rayleigh's foghorn trumpet is shown in two possible configurations, horizontal and vertical, in Figure CQ38.10. Which is the correct orientation? Decide whether the long dimension of the rectangular opening should be horizontal or vertical and argue for your decision.

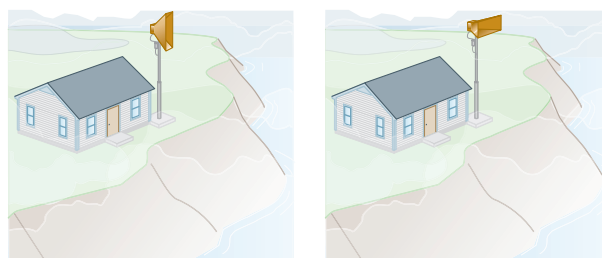


Figure CQ38.10

11. Why can you hear around corners, but not see around corners?

12. Figure CQ38.12 shows a megaphone in use. Construct a theoretical description of how a megaphone works. You may assume the sound of your voice radiates just through the opening of your mouth. Most



Figure CQ38.12

of the information in speech is carried not in a signal at the fundamental frequency, but in noises and in harmonics, with frequencies of a few thousand hertz. Does your theory allow any prediction that is simple to test?

Problems

ENHANCED
WebAssign The problems found in this chapter may be assigned online in Enhanced WebAssign

1. straightforward; 2. intermediate; 3. challenging

1. full solution available in the *Student Solutions Manual/Study Guide*

AMT Analysis Model tutorial available in Enhanced WebAssign

GP Guided Problem

M Master It tutorial available in Enhanced WebAssign

W Watch It video solution available in Enhanced WebAssign

Section 38.2 Diffraction Patterns from Narrow Slits

1. Light of wavelength 587.5 nm illuminates a slit of width 0.75 mm. (a) At what distance from the slit should a screen be placed if the first minimum in the diffraction pattern is to be 0.85 mm from the central maximum? (b) Calculate the width of the central maximum.

2. Helium–neon laser light ($\lambda = 632.8$ nm) is sent through a 0.300-mm-wide single slit. What is the width of the central maximum on a screen 1.00 m from the slit?

3. Sound with a frequency 650 Hz from a distant source passes through a doorway 1.10 m wide in a sound-absorbing wall. Find (a) the number and (b) the angular directions of the diffraction minima at listening positions along a line parallel to the wall.

4. A horizontal laser beam of wavelength 632.8 nm has a circular cross section 2.00 mm in diameter. A rectangular aperture is to be placed in the center of the beam so that when the light falls perpendicularly on a wall 4.50 m away, the central maximum fills a rectangle 110 mm wide and 6.00 mm high. The dimensions are measured between the minima bracketing the central maximum. Find the required (a) width and (b) height of the aperture. (c) Is the longer dimension of the central bright patch in the diffraction pattern horizontal or vertical? (d) Is the longer dimension of the aperture horizontal or vertical? (e) Explain the relationship between these two rectangles, using a diagram.

5. Coherent microwaves of wavelength 5.00 cm enter a tall, narrow window in a building otherwise essentially opaque to the microwaves. If the window is 36.0 cm wide, what is the distance from the central maximum to the first-order minimum along a wall 6.50 m from the window?

6. Light of wavelength 540 nm passes through a slit of width 0.200 mm. (a) The width of the central maximum on a screen is 8.10 mm. How far is the screen from the slit? (b) Determine the width of the first bright fringe to the side of the central maximum.

7. A screen is placed 50.0 cm from a single slit, which is illuminated with light of wavelength 690 nm. If the distance between the first and third minima in the diffraction pattern is 3.00 mm, what is the width of the slit?

8. A screen is placed a distance L from a single slit of width a , which is illuminated with light of wavelength λ . Assume $L \gg a$. If the distance between the minima for $m = m_1$ and $m = m_2$ in the diffraction pattern is Δy , what is the width of the slit?

9. Assume light of wavelength 650 nm passes through two slits 3.00 μm wide, with their centers 9.00 μm apart. Make a sketch of the combined diffraction and interference pattern in the form of a graph of intensity versus $\phi = (\pi a \sin \theta) / \lambda$. You may use Figure 38.7 as a starting point.

10. **What If?** Suppose light strikes a single slit of width a at an angle β from the perpendicular direction as shown

in Figure P38.10. Show that Equation 38.1, the condition for destructive interference, must be modified to read

$$\sin \theta_{\text{dark}} = m \frac{\lambda}{a} - \sin \beta$$

$$m = \pm 1, \pm 2, \pm 3, \dots$$

11. A diffraction pattern is formed on a screen 120 cm away from a 0.400-mm-wide slit. Monochromatic 546.1-nm light is used. Calculate the fractional intensity I/I_{max} at a point on the screen 4.10 mm from the center of the principal maximum.

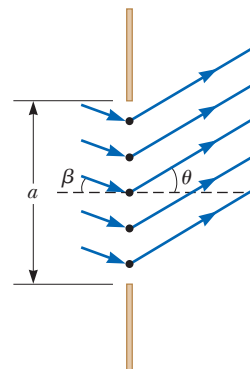


Figure P38.10

12. Coherent light of wavelength 501.5 nm is sent through two parallel slits in an opaque material. Each slit is 0.700 μm wide. Their centers are 2.80 μm apart. The light then falls on a semicylindrical screen, with its axis at the midline between the slits. We would like to describe the appearance of the pattern of light visible on the screen. (a) Find the direction for each two-slit interference maximum on the screen as an angle away from the bisector of the line joining the slits. (b) How many angles are there that represent two-slit interference maxima? (c) Find the direction for each single-slit interference minimum on the screen as an angle away from the bisector of the line joining the slits. (d) How many angles are there that represent single-slit interference minima? (e) How many of the angles in part (d) are identical to those in part (a)? (f) How many bright fringes are visible on the screen? (g) If the intensity of the central fringe is I_{max} , what is the intensity of the last fringe visible on the screen?

13. A beam of monochromatic light is incident on a single slit of width 0.600 mm. A diffraction pattern forms on a wall 1.30 m beyond the slit. The distance between the positions of zero intensity on both sides of the central maximum is 2.00 mm. Calculate the wavelength of the light.

Section 38.3 Resolution of Single-Slit and Circular Apertures

Note: In Problems 14, 19, 22, 23, and 67, you may use the Rayleigh criterion for the limiting angle of resolution of an eye. The standard may be overly optimistic for human vision.

14. The pupil of a cat's eye narrows to a vertical slit of width 0.500 mm in daylight. Assume the average wavelength of the light is 500 nm. What is the angular resolution for horizontally separated mice?

15. The angular resolution of a radio telescope is to be 0.100° when the incident waves have a wavelength of 3.00 mm. What minimum diameter is required for the telescope's receiving dish?

16. A *pinhole camera* has a small circular aperture of diameter D . Light from distant objects passes through the aperture into an otherwise dark box, falling on a screen at the other end of the box. The aperture in a pinhole camera has diameter $D = 0.600$ mm. Two

point sources of light of wavelength 550 nm are at a distance L from the hole. The separation between the sources is 2.80 cm, and they are just resolved by the camera. What is L ?

17. The objective lens of a certain refracting telescope has a diameter of 58.0 cm. The telescope is mounted in a satellite that orbits the Earth at an altitude of 270 km to view objects on the Earth's surface. Assuming an average wavelength of 500 nm, find the minimum distance between two objects on the ground if their images are to be resolved by this lens.
18. Yellow light of wavelength 589 nm is used to view an object under a microscope. The objective lens diameter is 9.00 mm. (a) What is the limiting angle of resolution? (b) Suppose it is possible to use visible light of any wavelength. What color should you choose to give the smallest possible angle of resolution, and what is this angle? (c) Suppose water fills the space between the object and the objective. What effect does this change have on the resolving power when 589-nm light is used?
19. What is the approximate size of the smallest object on the Earth that astronauts can resolve by eye when they are orbiting 250 km above the Earth? Assume $\lambda = 500$ nm and a pupil diameter of 5.00 mm.
20. **M** A helium–neon laser emits light that has a wavelength of 632.8 nm. The circular aperture through which the beam emerges has a diameter of 0.500 cm. Estimate the diameter of the beam 10.0 km from the laser.
21. **M** To increase the resolving power of a microscope, the object and the objective are immersed in oil ($n = 1.5$). If the limiting angle of resolution without the oil is $0.60 \mu\text{rad}$, what is the limiting angle of resolution with the oil? *Hint:* The oil changes the wavelength of the light.
22. Narrow, parallel, glowing gas-filled tubes in a variety of colors form block letters to spell out the name of a nightclub. Adjacent tubes are all 2.80 cm apart. The tubes forming one letter are filled with neon and radiate predominantly red light with a wavelength of 640 nm. For another letter, the tubes emit predominantly blue light at 440 nm. The pupil of a dark-adapted viewer's eye is 5.20 mm in diameter. (a) Which color is easier to resolve? State how you decide. (b) If she is in a certain range of distances away, the viewer can resolve the separate tubes of one color but not the other. The viewer's distance must be in what range for her to resolve the tubes of only one of these two colors?
23. **M** Impressionist painter Georges Seurat created paintings with an enormous number of dots of pure pigment, each of which was approximately 2.00 mm in diameter. The idea was to have colors such as red and green next to each other to form a scintillating canvas, such as in his masterpiece, *A Sunday Afternoon on the Island of La Grande Jatte* (Fig. P38.23). Assume $\lambda = 500$ nm and a pupil diameter of 5.00 mm. Beyond what distance would a viewer be unable to discern individual dots on the canvas?



Figure P38.23

24. **W** A circular radar antenna on a Coast Guard ship has a diameter of 2.10 m and radiates at a frequency of 15.0 GHz. Two small boats are located 9.00 km away from the ship. How close together could the boats be and still be detected as two objects?

Section 38.4 The Diffraction Grating

Note: In the following problems, assume the light is incident normally on the gratings.

25. A helium–neon laser ($\lambda = 632.8$ nm) is used to calibrate a diffraction grating. If the first-order maximum occurs at 20.5° , what is the spacing between adjacent grooves in the grating?
26. **M** White light is spread out into its spectral components by a diffraction grating. If the grating has 2 000 grooves per centimeter, at what angle does red light of wavelength 640 nm appear in first order?
27. Consider an array of parallel wires with uniform spacing of 1.30 cm between centers. In air at 20.0°C , ultrasound with a frequency of 37.2 kHz from a distant source is incident perpendicular to the array. (a) Find the number of directions on the other side of the array in which there is a maximum of intensity. (b) Find the angle for each of these directions relative to the direction of the incident beam.
28. **W** Three discrete spectral lines occur at angles of 10.1° , 13.7° , and 14.8° in the first-order spectrum of a grating spectrometer. (a) If the grating has 3 660 slits/cm, what are the wavelengths of the light? (b) At what angles are these lines found in the second-order spectrum?
29. The laser in a compact disc player must precisely follow the spiral track on the CD, along which the distance between one loop of the spiral and the next is only about $1.25 \mu\text{m}$. Figure P38.29 (page 1186) shows how a diffraction grating is used to provide information to keep the beam on track. The laser light passes through a diffraction grating before it reaches the CD. The strong central maximum of the diffraction pattern is used to read the information in the track of pits. The two first-order side maxima are designed to fall on the flat surfaces on both sides of the information track and are used for steering. As long as both beams are reflecting from smooth,

nonpitted surfaces, they are detected with constant high intensity. If the main beam wanders off the track, however, one of the side beams begins to strike pits on the information track and the reflected light diminishes. This change is used with an electronic circuit to guide the beam back to the desired location. Assume the laser light has a wavelength of 780 nm and the diffraction grating is positioned $6.90 \mu\text{m}$ from the disk. Assume the first-order beams are to fall on the CD $0.400 \mu\text{m}$ on either side of the information track. What should be the number of grooves per millimeter in the grating?

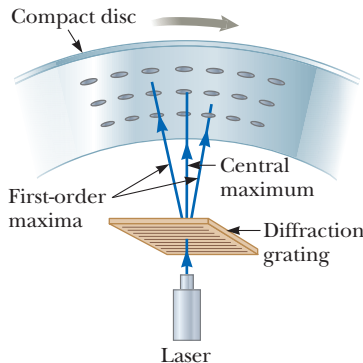


Figure P38.29

- 30.** A grating with 250 grooves/mm is used with an incandescent light source. Assume the visible spectrum to range in wavelength from 400 nm to 700 nm. In how many orders can one see (a) the entire visible spectrum and (b) the short-wavelength region of the visible spectrum?
- 31.** A diffraction grating has 4 200 rulings/cm. On a screen 2.00 m from the grating, it is found that for a particular order m , the maxima corresponding to two closely spaced wavelengths of sodium (589.0 nm and 589.6 nm) are separated by 1.54 mm. Determine the value of m .
- 32.** The hydrogen spectrum includes a red line at 656 nm and a blue-violet line at 434 nm. What are the angular separations between these two spectral lines for all visible orders obtained with a diffraction grating that has 4 500 grooves/cm?
- 33.** Light from an argon laser strikes a diffraction grating that has 5 310 grooves per centimeter. The central and first-order principal maxima are separated by 0.488 m on a wall 1.72 m from the grating. Determine the wavelength of the laser light.
- 34.** Show that whenever white light is passed through a diffraction grating of any spacing size, the violet end of the spectrum in the third order on a screen always overlaps the red end of the spectrum in the second order.
- 35.** Light of wavelength 500 nm is incident normally on a diffraction grating. If the third-order maximum of the diffraction pattern is observed at 32.0° , (a) what is the number of rulings per centimeter for the grating? (b) Determine the total number of primary maxima that can be observed in this situation.
- 36.** A wide beam of laser light with a wavelength of 632.8 nm is directed through several narrow parallel

slits, separated by 1.20 mm, and falls on a sheet of photographic film 1.40 m away. The exposure time is chosen so that the film stays unexposed everywhere except at the central region of each bright fringe. (a) Find the distance between these interference maxima. The film is printed as a transparency; it is opaque everywhere except at the exposed lines. Next, the same beam of laser light is directed through the transparency and allowed to fall on a screen 1.40 m beyond. (b) Argue that several narrow, parallel, bright regions, separated by 1.20 mm, appear on the screen as real images of the original slits. (A similar train of thought, at a soccer game, led Dennis Gabor to invent holography.)

- 37.** A beam of bright red light of wavelength 654 nm passes through a diffraction grating. Enclosing the space beyond the grating is a large semicylindrical screen centered on the grating, with its axis parallel to the slits in the grating. Fifteen bright spots appear on the screen. Find (a) the maximum and (b) the minimum possible values for the slit separation in the diffraction grating.

Section 38.5 Diffraction of X-Rays by Crystals

- 38.** If the spacing between planes of atoms in a NaCl crystal is 0.281 nm, what is the predicted angle at which 0.140-nm x-rays are diffracted in a first-order maximum?
- 39.** Potassium iodide (KI) has the same crystalline structure as NaCl, with atomic planes separated by 0.353 nm. A monochromatic x-ray beam shows a first-order diffraction maximum when the grazing angle is 7.60° . Calculate the x-ray wavelength.
- 40.** Monochromatic x-rays ($\lambda = 0.166 \text{ nm}$) from a nickel target are incident on a potassium chloride (KCl) crystal surface. The spacing between planes of atoms in KCl is 0.314 nm. At what angle (relative to the surface) should the beam be directed for a second-order maximum to be observed?
- 41.** The first-order diffraction maximum is observed at 12.6° for a crystal having a spacing between planes of atoms of 0.250 nm. (a) What wavelength x-ray is used to observe this first-order pattern? (b) How many orders can be observed for this crystal at this wavelength?

Section 38.6 Polarization of Light Waves

Problem 62 in Chapter 34 can be assigned with this section.

- 42.** Why is the following situation impossible? A technician is measuring the index of refraction of a solid material by observing the polarization of light reflected from its surface. She notices that when a light beam is projected from air onto the material surface, the reflected light is totally polarized parallel to the surface when the incident angle is 41.0° .
- 43.** Plane-polarized light is incident on a single polarizing disk with the direction of \vec{E}_0 parallel to the direction of the transmission axis. Through what angle should the disk be rotated so that the intensity in the transmitted beam is reduced by a factor of (a) 3.00, (b) 5.00, and (c) 10.0?

44. The angle of incidence of a light beam onto a reflecting surface is continuously variable. The reflected ray in air is completely polarized when the angle of incidence is 48.0° . What is the index of refraction of the reflecting material?
- AMT** 45. Unpolarized light passes through two ideal Polaroid sheets. The axis of the first is vertical, and the axis of the second is at 30.0° to the vertical. What fraction of the incident light is transmitted?
46. Two handheld radio transceivers with dipole antennas are separated by a large fixed distance. If the transmitting antenna is vertical, what fraction of the maximum received power will appear in the receiving antenna when it is inclined from the vertical by (a) 15.0° , (b) 45.0° , and (c) 90.0° ?
47. You use a sequence of ideal polarizing filters, each with its axis making the same angle with the axis of the previous filter, to rotate the plane of polarization of a polarized light beam by a total of 45.0° . You wish to have an intensity reduction no larger than 10.0%. (a) How many polarizers do you need to achieve your goal? (b) What is the angle between adjacent polarizers?
48. An unpolarized beam of light is incident on a stack of ideal polarizing filters. The axis of the first filter is perpendicular to the axis of the last filter in the stack. Find the fraction by which the transmitted beam's intensity is reduced in the three following cases. (a) Three filters are in the stack, each with its transmission axis at 45.0° relative to the preceding filter. (b) Four filters are in the stack, each with its transmission axis at 30.0° relative to the preceding filter. (c) Seven filters are in the stack, each with its transmission axis at 15.0° relative to the preceding filter. (d) Comment on comparing the answers to parts (a), (b), and (c).
49. The critical angle for total internal reflection for sapphire surrounded by air is 34.4° . Calculate the polarizing angle for sapphire.
50. For a particular transparent medium surrounded by air, find the polarizing angle θ_p in terms of the critical angle for total internal reflection θ_c .

- M** 51. Three polarizing plates whose planes are parallel are centered on a common axis. The directions of the transmission axes relative to the common vertical direction are shown in Figure P38.51. A linearly polarized beam of light with plane of polarization parallel to the vertical reference direction is incident from the left onto the first disk with intensity $I_i = 10.0$ units

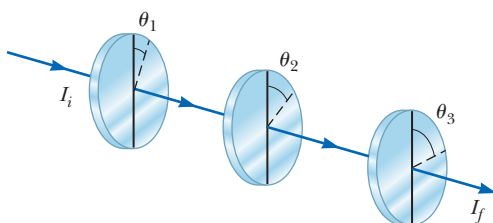


Figure P38.51

(arbitrary). Calculate the transmitted intensity I_f when $\theta_1 = 20.0^\circ$, $\theta_2 = 40.0^\circ$, and $\theta_3 = 60.0^\circ$. *Hint:* Make repeated use of Malus's law.

52. Two polarizing sheets are placed together with their transmission axes crossed so that no light is transmitted. A third sheet is inserted between them with its transmission axis at an angle of 45.0° with respect to each of the other axes. Find the fraction of incident unpolarized light intensity transmitted by the three-sheet combination. (Assume each polarizing sheet is ideal.)

Additional Problems

53. In a single-slit diffraction pattern, assuming each side maximum is halfway between the adjacent minima, find the ratio of the intensity of (a) the first-order side maximum and (b) the second-order side maximum to the intensity of the central maximum.
54. Laser light with a wavelength of 632.8 nm is directed through one slit or two slits and allowed to fall on a screen 2.60 m beyond. Figure P38.54 shows the pattern on the screen, with a centimeter ruler below it. (a) Did the light pass through one slit or two slits? Explain how you can determine the answer. (b) If one slit, find its width. If two slits, find the distance between their centers.

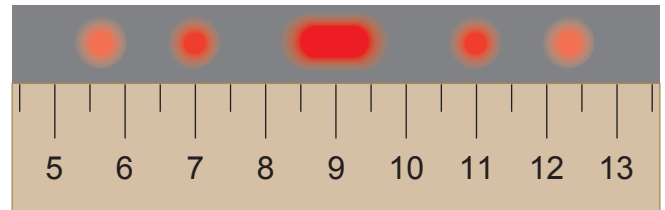


Figure P38.54

55. In water of uniform depth, a wide pier is supported on pilings in several parallel rows 2.80 m apart. Ocean waves of uniform wavelength roll in, moving in a direction that makes an angle of 80.0° with the rows of pilings. Find the three longest wavelengths of waves that are strongly reflected by the pilings.
56. The second-order dark fringe in a single-slit diffraction pattern is 1.40 mm from the center of the central maximum. Assuming the screen is 85.0 cm from a slit of width 0.800 mm and assuming monochromatic incident light, calculate the wavelength of the incident light.
57. Light from a helium–neon laser ($\lambda = 632.8$ nm) is incident on a single slit. What is the maximum width of the slit for which no diffraction minima are observed?
58. Two motorcycles separated laterally by 2.30 m are approaching an observer wearing night-vision goggles sensitive to infrared light of wavelength 885 nm. (a) Assume the light propagates through perfectly steady and uniform air. What aperture diameter is required if the motorcycles' headlights are to be resolved at a distance of 12.0 km? (b) Comment on how realistic the assumption in part (a) is.

59. The *Very Large Array* (VLA) is a set of 27 radio telescope dishes in Catron and Socorro counties, New Mexico (Fig. P38.59). The antennas can be moved apart on railroad tracks, and their combined signals give the resolving power of a synthetic aperture 36.0 km in diameter. (a) If the detectors are tuned to a frequency of 1.40 GHz, what is the angular resolution of the VLA? (b) Clouds of interstellar hydrogen radiate at the frequency used in part (a). What must be the separation distance of two clouds at the center of the galaxy, 26 000 light-years away, if they are to be resolved? (c) **What If?** As the telescope looks up, a circling hawk looks down. Assume the hawk is most sensitive to green light having a wavelength of 500 nm and has a pupil of diameter 12.0 mm. Find the angular resolution of the hawk's eye. (d) A mouse is on the ground 30.0 m below. By what distance must the mouse's whiskers be separated if the hawk can resolve them?



Figure P38.59

60. Two wavelengths λ and $\lambda + \Delta\lambda$ (with $\Delta\lambda \ll \lambda$) are incident on a diffraction grating. Show that the angular separation between the spectral lines in the m th-order spectrum is

$$\Delta\theta = \frac{\Delta\lambda}{\sqrt{(d/m)^2 - \lambda^2}}$$

where d is the slit spacing and m is the order number.

61. **Review.** A beam of 541-nm light is incident on a diffraction grating that has 400 grooves/mm. (a) Determine the angle of the second-order ray. (b) **What If?** If the entire apparatus is immersed in water, what is the new second-order angle of diffraction? (c) Show that the two diffracted rays of parts (a) and (b) are related through the law of refraction.
62. *Why is the following situation impossible?* A technician is sending laser light of wavelength 632.8 nm through a pair of slits separated by 30.0 μm . Each slit is of width 2.00 μm . The screen on which he projects the pattern is not wide enough, so light from the $m = 15$ interference maximum misses the edge of the screen and passes into the next lab station, startling a coworker.
63. A 750-nm light beam in air hits the flat surface of a certain liquid, and the beam is split into a reflected ray and a refracted ray. If the reflected ray is completely

polarized when it is at 36.0° with respect to the surface, what is the wavelength of the refracted ray?

64. Iridescent peacock feathers are shown in Figure P38.64a. The surface of one microscopic barbule is composed of transparent keratin that supports rods of dark brown melanin in a regular lattice, represented in Figure P38.64b. (Your fingernails are made of keratin, and melanin is the dark pigment giving color to human skin.) In a portion of the feather that can appear turquoise (blue-green), assume the melanin rods are uniformly separated by 0.25 μm , with air between them. (a) Explain how this structure can appear turquoise when it contains no blue or green pigment. (b) Explain how it can also appear violet if light falls on it in a different direction. (c) Explain how it can present different colors to your two eyes simultaneously, which is a characteristic of iridescence. (d) A compact disc can appear to be any color of the rainbow. Explain why the portion of the feather in Figure P38.64b cannot appear yellow or red. (e) What could be different about the array of melanin rods in a portion of the feather that does appear to be red?

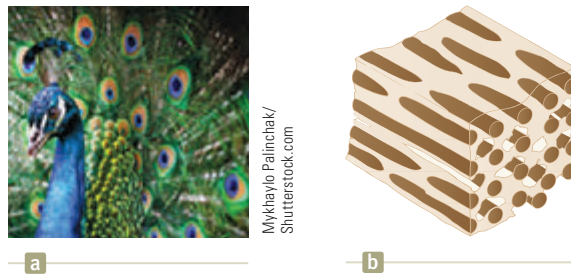


Figure P38.64

65. **AMT** Light in air strikes a water surface at the polarizing angle. The part of the beam refracted into the water strikes a submerged slab of material with refractive index $n = 1.62$ as shown in Figure P38.65. The light reflected from the upper surface of the slab is completely polarized. Find the angle θ between the water surface and the surface of the slab.

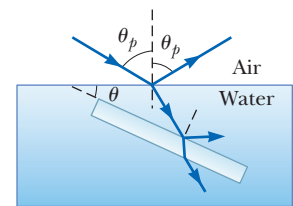


Figure P38.65

Problems 65 and 66.

66. Light in air (assume $n = 1$) strikes the surface of a liquid of index of refraction n_ℓ at the polarizing angle. The part of the beam refracted into the liquid strikes a submerged slab of material with refractive index n as shown in Figure P38.65. The light reflected from the upper surface of the slab is completely polarized. Find the angle θ between the water surface and the surface of the slab as a function of n and n_ℓ .
67. An American standard analog television picture (non-HDTV), also known as NTSC, is composed of approximately 485 visible horizontal lines of varying light intensity. Assume your ability to resolve the lines is limited only by the Rayleigh criterion, the pupils of

your eyes are 5.00 mm in diameter, and the average wavelength of the light coming from the screen is 550 nm. Calculate the ratio of the minimum viewing distance to the vertical dimension of the picture such that you will not be able to resolve the lines.

68. A pinhole camera has a small circular aperture of diameter D . Light from distant objects passes through the aperture into an otherwise dark box, falling on a screen located a distance L away. If D is too large, the display on the screen will be fuzzy because a bright point in the field of view will send light onto a circle of diameter slightly larger than D . On the other hand, if D is too small, diffraction will blur the display on the screen. The screen shows a reasonably sharp image if the diameter of the central disk of the diffraction pattern, specified by Equation 38.6, is equal to D at the screen. (a) Show that for monochromatic light with plane wave fronts and $L \gg D$, the condition for a sharp view is fulfilled if $D^2 = 2.44\lambda L$. (b) Find the optimum pinhole diameter for 500-nm light projected onto a screen 15.0 cm away.

69. The *scale* of a map is a number of kilometers per centimeter specifying the distance on the ground that any distance on the map represents. The scale of a spectrum is its *dispersion*, a number of nanometers per centimeter, specifying the change in wavelength that a distance across the spectrum represents. You must know the dispersion if you want to compare one spectrum with another or make a measurement of, for example, a Doppler shift. Let y represent the position relative to the center of a diffraction pattern projected onto a flat screen at distance L by a diffraction grating with slit spacing d . The dispersion is $d\lambda/dy$. (a) Prove that the dispersion is given by

$$\frac{d\lambda}{dy} = \frac{L^2 d}{m(L^2 + y^2)^{3/2}}$$

(b) A light with a mean wavelength of 550 nm is analyzed with a grating having 8 000 rulings/cm and projected onto a screen 2.40 m away. Calculate the dispersion in first order.

70. (a) Light traveling in a medium of index of refraction n_1 is incident at an angle θ on the surface of a medium of index n_2 . The angle between reflected and refracted rays is β . Show that

$$\tan \theta = \frac{n_2 \sin \beta}{n_1 - n_2 \cos \beta}$$

(b) **What If?** Show that this expression for $\tan \theta$ reduces to Brewster's law when $\beta = 90^\circ$.

71. The intensity of light in a diffraction pattern of a single slit is described by the equation

$$I = I_{\max} \frac{\sin^2 \phi}{\phi^2}$$

where $\phi = (\pi a \sin \theta)/\lambda$. The central maximum is at $\phi = 0$, and the side maxima are *approximately* at $\phi = (m + \frac{1}{2})\pi$ for $m = 1, 2, 3, \dots$. Determine more precisely (a) the location of the first side maximum, where $m = 1$, and (b) the location of the second side maximum. *Suggestion:* Observe in Figure 38.6a that the

graph of intensity versus ϕ has a horizontal tangent at maxima and also at minima.

72. How much diffraction spreading does a light beam undergo? One quantitative answer is the *full width at half maximum* of the central maximum of the single-slit Fraunhofer diffraction pattern. You can evaluate this angle of spreading in this problem. (a) In Equation 38.2, define $\phi = \pi a \sin \theta/\lambda$ and show that at the point where $I = 0.5I_{\max}$ we must have $\phi = \sqrt{2} \sin \phi$. (b) Let $y_1 = \sin \phi$ and $y_2 = \phi/\sqrt{2}$. Plot y_1 and y_2 on the same set of axes over a range from $\phi = 1$ rad to $\phi = \pi/2$ rad. Determine ϕ from the point of intersection of the two curves. (c) Then show that if the fraction λ/a is not large, the angular full width at half maximum of the central diffraction maximum is $\theta = 0.885\lambda/a$. (d) **What If?** Another method to solve the transcendental equation $\phi = \sqrt{2} \sin \phi$ in part (a) is to guess a first value of ϕ , use a computer or calculator to see how nearly it fits, and continue to update your estimate until the equation balances. How many steps (iterations) does this process take?

73. Two closely spaced wavelengths of light are incident on a diffraction grating. (a) Starting with Equation 38.7, show that the angular dispersion of the grating is given by

$$\frac{d\theta}{d\lambda} = \frac{m}{d \cos \theta}$$

(b) A square grating 2.00 cm on each side containing 8 000 equally spaced slits is used to analyze the spectrum of mercury. Two closely spaced lines emitted by this element have wavelengths of 579.065 nm and 576.959 nm. What is the angular separation of these two wavelengths in the second-order spectrum?

74. Light of wavelength 632.8 nm illuminates a single slit, and a diffraction pattern is formed on a screen 1.00 m from the slit. (a) Using the data in the following table, plot relative intensity versus position. Choose an appropriate value for the slit width a and, on the same graph used for the experimental data, plot the theoretical expression for the relative intensity

$$\frac{I}{I_{\max}} = \frac{\sin^2 \phi}{\phi^2}$$

where $\phi = (\pi a \sin \theta)/\lambda$. (b) What value of a gives the best fit of theory and experiment?

Position Relative to Central Maximum (mm)	Relative Intensity
0	1.00
0.8	0.95
1.6	0.80
3.2	0.39
4.8	0.079
6.5	0.003
8.1	0.036
9.7	0.043
11.3	0.013
12.9	0.000 3
14.5	0.012
16.1	0.015
17.7	0.004 4
19.3	0.000 3

Challenge Problems

75. Figure P38.75a is a three-dimensional sketch of a birefringent crystal. The dotted lines illustrate how a thin, parallel-faced slab of material could be cut from the larger specimen with the crystal's optic axis parallel to the faces of the plate. A section cut from the crystal in this manner is known as a *retardation plate*. When a beam of light is incident on the plate perpendicular to the direction of the optic axis as shown in Figure P38.75b, the O ray and the E ray travel along a single straight line, but with different speeds. The figure shows the wave fronts for the two rays. (a) Let the thickness of the plate be d . Show that the phase difference between the O ray and the E ray after traveling the thickness of the plate is

$$\theta = \frac{2\pi d}{\lambda} |n_O - n_E|$$

where λ is the wavelength in air. (b) In a particular case, the incident light has a wavelength of 550 nm. Find the minimum value of d for a quartz plate for which $\theta = \pi/2$. Such a plate is called a *quarter-wave plate*. Use values of n_O and n_E from Table 38.1.

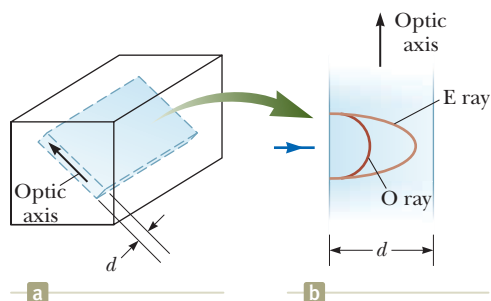


Figure P38.75

76. A spy satellite can consist of a large-diameter concave mirror forming an image on a digital-camera detector and sending the picture to a ground receiver by radio waves. In effect, it is an astronomical telescope in orbit, looking down instead of up. (a) Can a spy satellite read a license plate? (b) Can it read the date on a dime? Argue for your answers by making an order-of-magnitude calculation, specifying the data you estimate.

77. Suppose the single slit in Figure 38.4 is 6.00 cm wide and in front of a microwave source operating at 7.50 GHz. (a) Calculate the angle for the first minimum in the diffraction pattern. (b) What is the relative intensity I/I_{\max} at $\theta = 15.0^\circ$? (c) Assume two such

sources, separated laterally by 20.0 cm, are behind the slit. What must be the maximum distance between the plane of the sources and the slit if the diffraction patterns are to be resolved? In this case, the approximation $\sin \theta \approx \tan \theta$ is not valid because of the relatively small value of a/λ .

78. In Figure P38.78, suppose the transmission axes of the left and right polarizing disks are perpendicular to each other. Also, let the center disk be rotated on the common axis with an angular speed ω . Show that if unpolarized light is incident on the left disk with an intensity I_{\max} , the intensity of the beam emerging from the right disk is

$$I = \frac{1}{16} I_{\max} (1 - \cos 4\omega t)$$

This result means that the intensity of the emerging beam is modulated at a rate four times the rate of rotation of the center disk. *Suggestion:* Use the trigonometric identities $\cos^2 \theta = \frac{1}{2}(1 + \cos 2\theta)$ and $\sin^2 \theta = \frac{1}{2}(1 - \cos 2\theta)$.

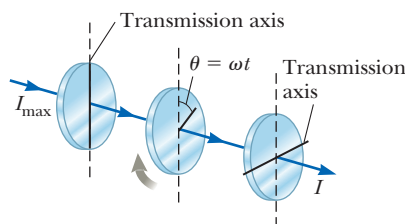


Figure P38.78

79. Consider a light wave passing through a slit and propagating toward a distant screen. Figure P38.79 shows the intensity variation for the pattern on the screen. Give a mathematical argument that more than 90% of the transmitted energy is in the central maximum of the diffraction pattern. *Suggestion:* You are not expected to calculate the precise percentage, but explain the steps of your reasoning. You may use the identification

$$\frac{1}{1^2} + \frac{1}{3^2} + \frac{1}{5^2} + \dots = \frac{\pi^2}{8}$$

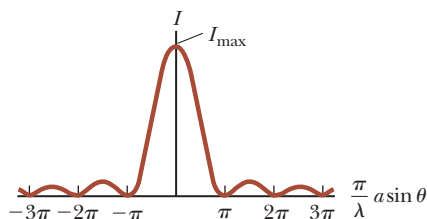
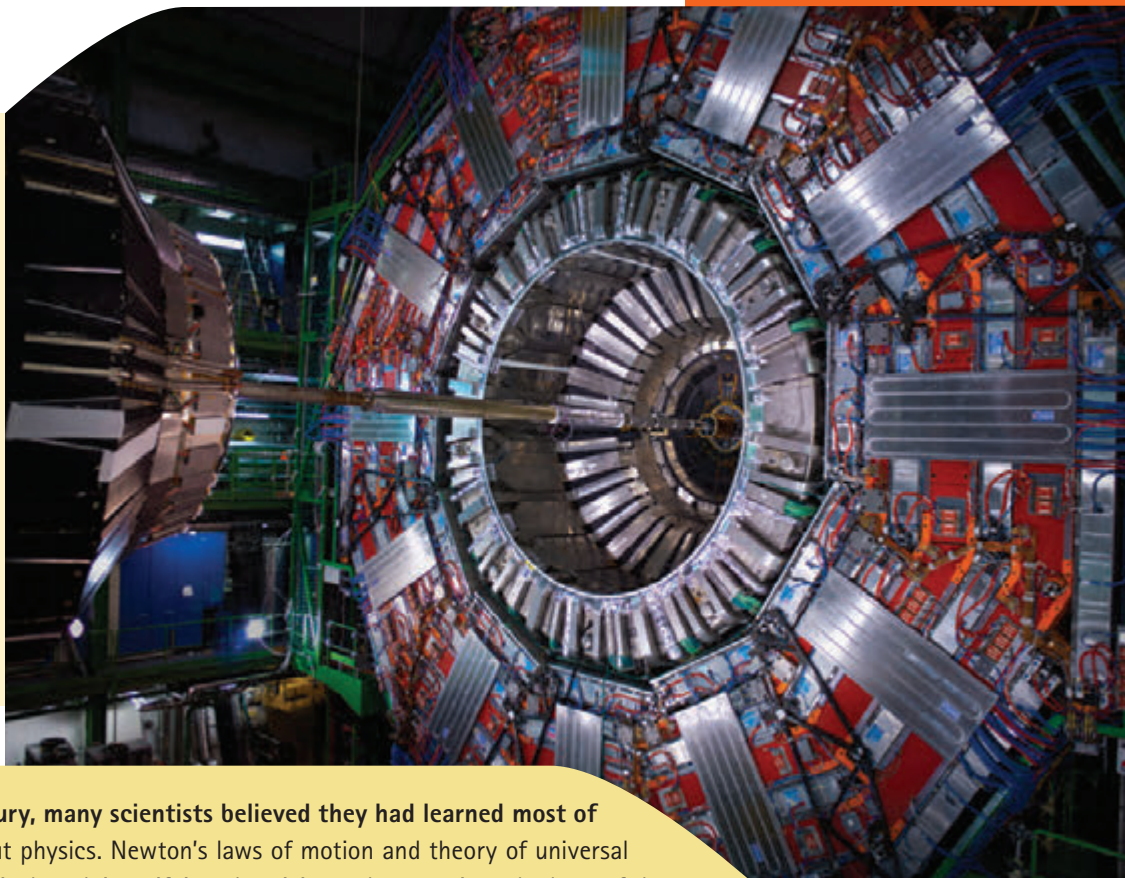


Figure P38.79

The Compact Muon Solenoid (CMS) Detector is part of the Large Hadron Collider at the European Laboratory for Particle Physics operated by CERN. It is one of several detectors that search for elementary particles. For a sense of scale, the green structure to the left of the detector and extending to the top is five stories high. (CERN)



At the end of the 19th century, many scientists believed they had learned most of what there was to know about physics. Newton's laws of motion and theory of universal gravitation, Maxwell's theoretical work in unifying electricity and magnetism, the laws of thermodynamics and kinetic theory, and the principles of optics were highly successful in explaining a variety of phenomena.

At the turn of the 20th century, however, a major revolution shook the world of physics. In 1900, Max Planck provided the basic ideas that led to the formulation of the quantum theory, and in 1905, Albert Einstein formulated his special theory of relativity. The excitement of the times is captured in Einstein's own words: "It was a marvelous time to be alive." Both theories were to have a profound effect on our understanding of nature. Within a few decades, they inspired new developments in the fields of atomic physics, nuclear physics, and condensed-matter physics.

In Chapter 39, we shall introduce the special theory of relativity. The theory provides us with a new and deeper view of physical laws. Although the predictions of this theory often violate our common sense, the theory correctly describes the results of experiments involving speeds near the speed of light. The extended version of this textbook, *Physics for Scientists and Engineers with Modern Physics*, covers the basic concepts of quantum mechanics and their application to atomic and molecular physics. In addition, we introduce condensed matter physics, nuclear physics, particle physics, and cosmology in the extended version.

Even though the physics that was developed during the 20th century has led to a multitude of important technological achievements, the story is still incomplete. Discoveries will continue to evolve during our lifetimes, and many of these discoveries will deepen or refine our understanding of nature and the Universe around us. It is still a "marvelous time to be alive." ■

- 39.1 The Principle of Galilean Relativity
- 39.2 The Michelson–Morley Experiment
- 39.3 Einstein's Principle of Relativity
- 39.4 Consequences of the Special Theory of Relativity
- 39.5 The Lorentz Transformation Equations
- 39.6 The Lorentz Velocity Transformation Equations
- 39.7 Relativistic Linear Momentum
- 39.8 Relativistic Energy
- 39.9 The General Theory of Relativity



Standing on the shoulders of a giant. David Serway, son of one of the authors, watches over two of his children, Nathan and Kaitlyn, as they frolic in the arms of Albert Einstein's statue at the Einstein memorial in Washington, D.C. It is well known that Einstein, the principal architect of relativity, was very fond of children. (*Emily Serway*)

Our everyday experiences and observations involve objects that move at speeds much less than the speed of light. Newtonian mechanics was formulated by observing and describing the motion of such objects, and this formalism is very successful in describing a wide range of phenomena that occur at low speeds. Nonetheless, it fails to describe properly the motion of objects whose speeds approach that of light.

Experimentally, the predictions of Newtonian theory can be tested at high speeds by accelerating electrons or other charged particles through a large electric potential difference. For example, it is possible to accelerate an electron to a speed of $0.99c$ (where c is the speed of light) by using a potential difference of several million volts. According to Newtonian mechanics, if the potential difference is increased by a factor of 4, the electron's kinetic energy is four times greater and its speed should double to $1.98c$. Experiments show, however, that the speed of the electron—as well as the speed of any other object in the Universe—always remains less than the speed of light, regardless of the size of the accelerating voltage. Because it places no upper limit on speed, Newtonian mechanics is contrary to modern experimental results and is clearly a limited theory.

In 1905, at the age of only 26, Einstein published his special theory of relativity. Regarding the theory, Einstein wrote:

The relativity theory arose from necessity, from serious and deep contradictions in the old theory from which there seemed no escape. The strength of the new theory lies in the consistency and simplicity with which it solves all these difficulties.¹

Although Einstein made many other important contributions to science, the special theory of relativity alone represents one of the greatest intellectual achievements of all time. With this theory, experimental observations can be correctly predicted over the range of speeds from $v = 0$ to speeds approaching the speed of light. At low speeds, Einstein's theory reduces to Newtonian mechanics as a limiting situation. It is important to recognize that Einstein was working on electromagnetism when he developed the special theory of relativity. He was convinced that Maxwell's equations were correct, and to reconcile them with one of his postulates, he was forced into the revolutionary notion of assuming that space and time are not absolute.

This chapter gives an introduction to the special theory of relativity, with emphasis on some of its predictions. In addition to its well-known and essential role in theoretical physics, the special theory of relativity has practical applications, including the design of nuclear power plants and modern global positioning system (GPS) units. These devices depend on relativistic principles for proper design and operation.

39.1 The Principle of Galilean Relativity

To describe a physical event, we must establish a frame of reference. You should recall from Chapter 5 that an inertial frame of reference is one in which an object is observed to have no acceleration when no forces act on it. Furthermore, any frame moving with constant velocity with respect to an inertial frame must also be an inertial frame.

There is no absolute inertial reference frame. Therefore, the results of an experiment performed in a vehicle moving with uniform velocity must be identical to the results of the same experiment performed in a stationary vehicle. The formal statement of this result is called the **principle of Galilean relativity**:

The laws of mechanics must be the same in all inertial frames of reference.

◀ Principle of Galilean relativity

Let's consider an observation that illustrates the equivalence of the laws of mechanics in different inertial frames. The pickup truck in Figure 39.1a moves with a

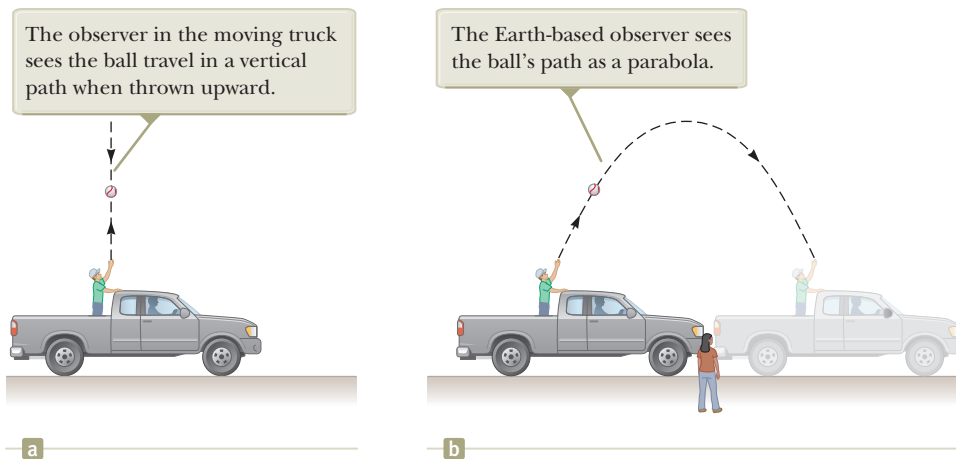


Figure 39.1 Two observers watch the path of a thrown ball and obtain different results.

¹A. Einstein and L. Infeld, *The Evolution of Physics* (New York: Simon and Schuster, 1961).

constant velocity with respect to the ground. If a passenger in the truck throws a ball straight up and if air resistance is neglected, the passenger observes that the ball moves in a vertical path. The motion of the ball appears to be precisely the same as if the ball were thrown by a person at rest on the Earth. The law of universal gravitation and the equations of motion under constant acceleration are obeyed whether the truck is at rest or in uniform motion.

Consider also an observer on the ground as in Figure 39.1b. Both observers agree on the laws of physics: the observer in the truck throws a ball straight up, and it rises and falls back into his hand according to the particle under constant acceleration model. Do the observers agree on the path of the ball thrown by the observer in the truck? The observer on the ground sees the path of the ball as a parabola as illustrated in Figure 39.1b, whereas, as mentioned earlier, the observer in the truck sees the ball move in a vertical path. Furthermore, according to the observer on the ground, the ball has a horizontal component of velocity equal to the velocity of the truck, and the horizontal motion of the ball is described by the particle under constant velocity model. Although the two observers disagree on certain aspects of the situation, they agree on the validity of Newton's laws and on the results of applying appropriate analysis models that we have learned. This agreement implies that no mechanical experiment can detect any difference between the two inertial frames. The only thing that can be detected is the relative motion of one frame with respect to the other.

Quick Quiz 39.1 Which observer in Figure 39.1 sees the ball's *correct* path? (a) the observer in the truck (b) the observer on the ground (c) both observers

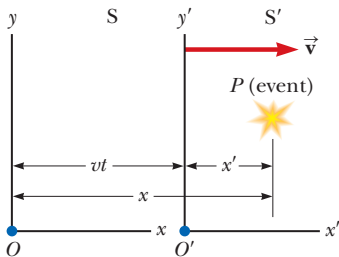


Figure 39.2 An event occurs at a point P . The event is seen by two observers in inertial frames S and S' , where S' moves with a velocity \vec{v} relative to S .

Suppose some physical phenomenon, which we call an *event*, occurs and is observed by an observer at rest in an inertial reference frame. The wording “in a frame” means that the observer is at rest with respect to the origin of that frame. The event's location and time of occurrence can be specified by the four coordinates (x, y, z, t) . We would like to be able to transform these coordinates from those of an observer in one inertial frame to those of another observer in a frame moving with uniform relative velocity compared with the first frame.

Consider two inertial frames S and S' (Fig. 39.2). The S' frame moves with a constant velocity \vec{v} along the common x and x' axes, where \vec{v} is measured relative to S . We assume the origins of S and S' coincide at $t = 0$ and an event occurs at point P in space at some instant of time. For simplicity, we show the observer O in the S frame and the observer O' in the S' frame as blue dots at the origins of their coordinate frames in Figure 39.2, but that is not necessary: either observer could be at any fixed location in his or her frame. Observer O describes the event with space–time coordinates (x, y, z, t) , whereas observer O' in S' uses the coordinates (x', y', z', t') to describe the same event. Model the origin of S' as a particle under constant velocity relative to the origin of S . As we see from the geometry in Figure 39.2, the relationships among these various coordinates can be written

$$x' = x - vt \quad y' = y \quad z' = z \quad t' = t \quad (39.1)$$

Galilean transformation equations ▶

These equations are the **Galilean space–time transformation equations**. Note that time is assumed to be the same in both inertial frames. That is, within the framework of classical mechanics, all clocks run at the same rate, regardless of their velocity, so the time at which an event occurs for an observer in S is the same as the time for the same event in S' . Consequently, the time interval between two successive events should be the same for both observers. Although this assumption may seem obvious, it turns out to be incorrect in situations where v is comparable to the speed of light.

Now suppose a particle moves through a displacement of magnitude dx along the x axis in a time interval dt as measured by an observer in S . It follows from Equations 39.1 that the corresponding displacement dx' measured by an observer in S' is

$dx' = dx - v dt$, where frame S' is moving with speed v in the x direction relative to frame S . Because $dt = dt'$, we find that

$$\frac{dx'}{dt'} = \frac{dx}{dt} - v$$

or

$$u'_x = u_x - v \quad (39.2)$$

where u_x and u'_x are the x components of the velocity of the particle measured by observers in S and S' , respectively. (We use the symbol \vec{u} rather than \vec{v} for particle velocity because \vec{v} is already used for the relative velocity of two reference frames.) Equation 39.2 is the **Galilean velocity transformation equation**. It is consistent with our intuitive notion of time and space as well as with our discussions in Section 4.6. As we shall soon see, however, it leads to serious contradictions when applied to electromagnetic waves.

Quick Quiz 39.2 A baseball pitcher with a 90-mi/h fastball throws a ball while standing on a railroad flatcar moving at 110 mi/h. The ball is thrown in the same direction as that of the velocity of the train. If you apply the Galilean velocity transformation equation to this situation, is the speed of the ball relative to the Earth (a) 90 mi/h, (b) 110 mi/h, (c) 20 mi/h, (d) 200 mi/h, or (e) impossible to determine?

The Speed of Light

It is quite natural to ask whether the principle of Galilean relativity also applies to electricity, magnetism, and optics. Experiments indicate that the answer is no. Recall from Chapter 34 that Maxwell showed that the speed of light in free space is $c = 3.00 \times 10^8$ m/s. Physicists of the late 1800s thought light waves move through a medium called the *ether* and the speed of light is c only in a special, absolute frame at rest with respect to the ether. The Galilean velocity transformation equation was expected to hold for observations of light made by an observer in any frame moving at speed v relative to the absolute ether frame. That is, if light travels along the x axis and an observer moves with velocity \vec{v} along the x axis, the observer measures the light to have speed $c \pm v$, depending on the directions of travel of the observer and the light.

Because the existence of a preferred, absolute ether frame would show that light is similar to other classical waves and that Newtonian ideas of an absolute frame are true, considerable importance was attached to establishing the existence of the ether frame. Prior to the late 1800s, experiments involving light traveling in media moving at the highest laboratory speeds attainable at that time were not capable of detecting differences as small as that between c and $c \pm v$. Starting in about 1880, scientists decided to use the Earth as the moving frame in an attempt to improve their chances of detecting these small changes in the speed of light.

Observers fixed on the Earth can take the view that they are stationary and that the absolute ether frame containing the medium for light propagation moves past them with speed v . Determining the speed of light under these circumstances is similar to determining the speed of an aircraft traveling in a moving air current, or wind; consequently, we speak of an “ether wind” blowing through our apparatus fixed to the Earth.

A direct method for detecting an ether wind would use an apparatus fixed to the Earth to measure the ether wind’s influence on the speed of light. If v is the speed of the ether relative to the Earth, light should have its maximum speed $c + v$ when propagating downwind as in Figure 39.3a. Likewise, the speed of light should have its minimum value $c - v$ when the light is propagating upwind as in Figure 39.3b and an intermediate value $(c^2 - v^2)^{1/2}$ when the light is directed such that it travels perpendicular to the ether wind as in Figure 39.3c. In this latter case, the vector \vec{c}

Pitfall Prevention 39.1

The Relationship Between the S and S' Frames Many of the mathematical representations in this chapter are true *only* for the specified relationship between the S and S' frames. The x and x' axes coincide, except their origins are different. The y and y' axes (and the z and z' axes) are parallel, but they only coincide at one instant due to the time-varying position of the origin of S' with respect to that of S . We choose the time $t = 0$ to be the instant at which the origins of the two coordinate systems coincide. If the S' frame is moving in the positive x direction relative to S , then v is positive; otherwise, it is negative.

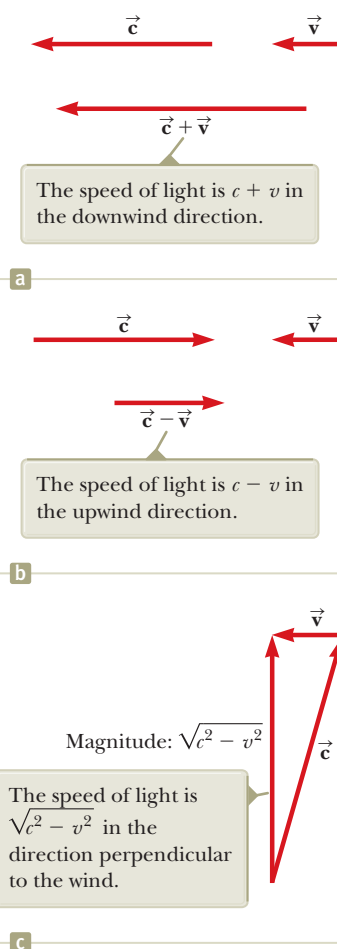


Figure 39.3 If the velocity of the ether wind relative to the Earth is \vec{v} and the velocity of light relative to the ether is \vec{c} , the speed of light relative to the Earth depends on the direction of the Earth’s velocity.

must be aimed upstream so that the resultant velocity is perpendicular to the wind, like the boat in Figure 4.21b. If the Sun is assumed to be at rest in the ether, the velocity of the ether wind would be equal to the orbital velocity of the Earth around the Sun, which has a magnitude of approximately 30 km/s or 3×10^4 m/s. Because $c = 3 \times 10^8$ m/s, it is necessary to detect a change in speed of approximately 1 part in 10^4 for measurements in the upwind or downwind directions. Although such a change is experimentally measurable, all attempts to detect such changes and establish the existence of the ether wind (and hence the absolute frame) proved futile! We shall discuss the classic experimental search for the ether in Section 39.2.

The principle of Galilean relativity refers only to the laws of mechanics. If it is assumed the laws of electricity and magnetism are the same in all inertial frames, a paradox concerning the speed of light immediately arises. That can be understood by recognizing that Maxwell's equations imply that the speed of light always has the fixed value 3.00×10^8 m/s in all inertial frames, a result in direct contradiction to what is expected based on the Galilean velocity transformation equation. According to Galilean relativity, the speed of light should *not* be the same in all inertial frames.

To resolve this contradiction in theories, we must conclude that either (1) the laws of electricity and magnetism are not the same in all inertial frames or (2) the Galilean velocity transformation equation is incorrect. If we assume the first alternative, a preferred reference frame in which the speed of light has the value c must exist and the measured speed must be greater or less than this value in any other reference frame, in accordance with the Galilean velocity transformation equation. If we assume the second alternative, we must abandon the notions of absolute time and absolute length that form the basis of the Galilean space–time transformation equations.

39.2 The Michelson–Morley Experiment

The most famous experiment designed to detect small changes in the speed of light was first performed in 1881 by A. A. Michelson (see Section 37.6) and later repeated under various conditions by Michelson and Edward W. Morley (1838–1923). As we shall see, the outcome of the experiment contradicted the ether hypothesis.

The experiment was designed to determine the velocity of the Earth relative to that of the hypothetical ether. The experimental tool used was the Michelson interferometer, which was discussed in Section 37.6 and is shown again in Figure 39.4. Arm 2 is aligned along the direction of the Earth's motion through space. The Earth moving through the ether at speed v is equivalent to the ether flowing past the Earth in the opposite direction with speed v . This ether wind blowing in the direction opposite the direction of the Earth's motion should cause the speed of light measured in the Earth frame to be $c - v$ as the light approaches mirror M_2 and $c + v$ after reflection, where c is the speed of light in the ether frame.

The two light beams reflect from M_1 and M_2 and recombine, and an interference pattern is formed as discussed in Section 37.6. The interference pattern is then observed while the interferometer is rotated through an angle of 90° . This rotation interchanges the speed of the ether wind between the arms of the interferometer. The rotation should cause the fringe pattern to shift slightly but measurably. Measurements failed, however, to show any change in the interference pattern! The Michelson–Morley experiment was repeated at different times of the year when the ether wind was expected to change direction and magnitude, but the results were always the same: no fringe shift of the magnitude required was *ever* observed.²

The negative results of the Michelson–Morley experiment not only contradicted the ether hypothesis, but also showed that it is impossible to measure the absolute

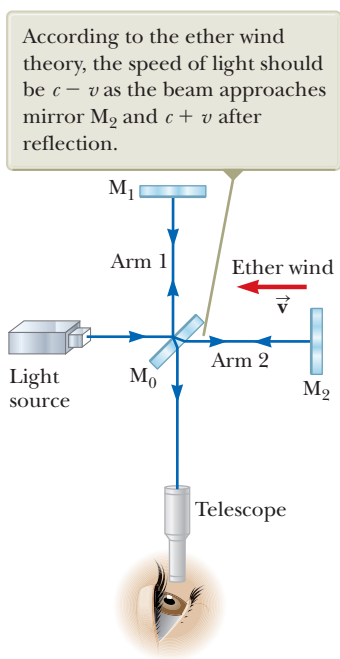


Figure 39.4 A Michelson interferometer is used in an attempt to detect the ether wind.

²From an Earth-based observer's point of view, changes in the Earth's speed and direction of motion in the course of a year are viewed as ether wind shifts. Even if the speed of the Earth with respect to the ether were zero at some time, six months later the speed of the Earth would be 60 km/s with respect to the ether and as a result a fringe shift should be noticed. No shift has ever been observed, however.

velocity of the Earth with respect to the ether frame. Einstein, however, offered a postulate for his special theory of relativity that places quite a different interpretation on these null results. In later years, when more was known about the nature of light, the idea of an ether that permeates all of space was abandoned. Light is now understood to be an electromagnetic wave, which requires no medium for its propagation. As a result, the idea of an ether in which these waves travel became unnecessary.

Details of the Michelson–Morley Experiment

To understand the outcome of the Michelson–Morley experiment, let's assume the two arms of the interferometer in Figure 39.4 are of equal length L . We shall analyze the situation as if there were an ether wind because that is what Michelson and Morley expected to find. As noted above, the speed of the light beam along arm 2 should be $c - v$ as the beam approaches M_2 and $c + v$ after the beam is reflected. We model a pulse of light as a particle under constant speed. Therefore, the time interval for travel to the right for the pulse is $\Delta t = L/(c - v)$ and the time interval for travel to the left is $\Delta t = L/(c + v)$. The total time interval for the round trip along arm 2 is

$$\Delta t_{\text{arm 2}} = \frac{L}{c + v} + \frac{L}{c - v} = \frac{2Lc}{c^2 - v^2} = \frac{2L}{c} \left(1 - \frac{v^2}{c^2}\right)^{-1}$$

Now consider the light beam traveling along arm 1, perpendicular to the ether wind. Because the speed of the beam relative to the Earth is $(c^2 - v^2)^{1/2}$ in this case (see Fig. 39.3c), the time interval for travel for each half of the trip is $\Delta t = L/(c^2 - v^2)^{1/2}$ and the total time interval for the round trip is

$$\Delta t_{\text{arm 1}} = \frac{2L}{(c^2 - v^2)^{1/2}} = \frac{2L}{c} \left(1 - \frac{v^2}{c^2}\right)^{-1/2}$$

The time difference Δt between the horizontal round trip (arm 2) and the vertical round trip (arm 1) is

$$\Delta t = \Delta t_{\text{arm 2}} - \Delta t_{\text{arm 1}} = \frac{2L}{c} \left[\left(1 - \frac{v^2}{c^2}\right)^{-1} - \left(1 - \frac{v^2}{c^2}\right)^{-1/2} \right]$$

Because $v^2/c^2 \ll 1$, we can simplify this expression by using the following binomial expansion after dropping all terms higher than second order:

$$(1 - x)^n \approx 1 - nx \quad (\text{for } x \ll 1)$$

In our case, $x = v^2/c^2$, and we find that

$$\Delta t = \Delta t_{\text{arm 2}} - \Delta t_{\text{arm 1}} \approx \frac{Lv^2}{c^3} \quad (39.3)$$

This time difference between the two instants at which the reflected beams arrive at the viewing telescope gives rise to a phase difference between the beams, producing an interference pattern when they combine at the position of the telescope. A shift in the interference pattern should be detected when the interferometer is rotated through 90° in a horizontal plane so that the two beams exchange roles. This rotation results in a time difference twice that given by Equation 39.3. Therefore, the path difference that corresponds to this time difference is

$$\Delta d = c(2\Delta t) = \frac{2Lv^2}{c^2}$$

Because a change in path length of one wavelength corresponds to a shift of one fringe, the corresponding fringe shift is equal to this path difference divided by the wavelength of the light:


$$\text{Shift} = \frac{2Lv^2}{\lambda c^2} \quad (39.4)$$

In the experiments by Michelson and Morley, each light beam was reflected by mirrors many times to give an effective path length L of approximately 11 m. Using this value, taking v to be equal to 3.0×10^4 m/s (the speed of the Earth around the Sun), and using 500 nm for the wavelength of the light, we expect a fringe shift of

$$\text{Shift} = \frac{2(11 \text{ m})(3.0 \times 10^4 \text{ m/s})^2}{(5.0 \times 10^{-7} \text{ m})(3.0 \times 10^8 \text{ m/s})^2} = 0.44$$

The instrument used by Michelson and Morley could detect shifts as small as 0.01 fringe, but it detected no shift whatsoever in the fringe pattern! The experiment has been repeated many times since by different scientists under a wide variety of conditions, and no fringe shift has ever been detected. Therefore, it was concluded that the motion of the Earth with respect to the postulated ether cannot be detected.

Many efforts were made to explain the null results of the Michelson–Morley experiment and to save the ether frame concept and the Galilean velocity transformation equation for light. All proposals resulting from these efforts have been shown to be wrong. No experiment in the history of physics received such valiant efforts to explain the absence of an expected result as did the Michelson–Morley experiment. The stage was set for Einstein, who solved the problem in 1905 with his special theory of relativity.



© Mary Evans Picture Library/Alamy

Albert Einstein

German–American Physicist
(1879–1955)

Einstein, one of the greatest physicists of all time, was born in Ulm, Germany. In 1905, at age 26, he published four scientific papers that revolutionized physics. Two of these papers were concerned with what is now considered his most important contribution: the special theory of relativity.

In 1916, Einstein published his work on the general theory of relativity. The most dramatic prediction of this theory is the degree to which light is deflected by a gravitational field. Measurements made by astronomers on bright stars in the vicinity of the eclipsed Sun in 1919 confirmed Einstein's prediction, and Einstein became a world celebrity as a result. Einstein was deeply disturbed by the development of quantum mechanics in the 1920s despite his own role as a scientific revolutionary. In particular, he could never accept the probabilistic view of events in nature that is a central feature of quantum theory. The last few decades of his life were devoted to an unsuccessful search for a unified theory that would combine gravitation and electromagnetism.

39.3 Einstein's Principle of Relativity

In the previous section, we noted the impossibility of measuring the speed of the ether with respect to the Earth and the failure of the Galilean velocity transformation equation in the case of light. Einstein proposed a theory that boldly removed these difficulties and at the same time completely altered our notion of space and time.³ He based his special theory of relativity on two postulates:

- 1. The principle of relativity:** The laws of physics must be the same in all inertial reference frames.
- 2. The constancy of the speed of light:** The speed of light in vacuum has the same value, $c = 3.00 \times 10^8$ m/s, in all inertial frames, regardless of the velocity of the observer or the velocity of the source emitting the light.

The first postulate asserts that *all* the laws of physics—those dealing with mechanics, electricity and magnetism, optics, thermodynamics, and so on—are the same in all reference frames moving with constant velocity relative to one another. This postulate is a generalization of the principle of Galilean relativity, which refers only to the laws of mechanics. From an experimental point of view, Einstein's principle of relativity means that any kind of experiment (measuring the speed of light, for example) performed in a laboratory at rest must give the same result when performed in a laboratory moving at a constant velocity with respect to the first one. Hence, no preferred inertial reference frame exists, and it is impossible to detect absolute motion.

Note that postulate 2 is required by postulate 1: if the speed of light were not the same in all inertial frames, measurements of different speeds would make it possible to distinguish between inertial frames. As a result, a preferred, absolute frame could be identified, in contradiction to postulate 1.

Although the Michelson–Morley experiment was performed before Einstein published his work on relativity, it is not clear whether or not Einstein was aware of the details of the experiment. Nonetheless, the null result of the experiment can be readily understood within the framework of Einstein's theory. According to

³A. Einstein, "On the Electrodynamics of Moving Bodies," *Ann. Physik* 17:891, 1905. For an English translation of this article and other publications by Einstein, see the book by H. Lorentz, A. Einstein, H. Minkowski, and H. Weyl, *The Principle of Relativity* (New York: Dover, 1958).

his principle of relativity, the premises of the Michelson–Morley experiment were incorrect. In the process of trying to explain the expected results, we stated that when light traveled against the ether wind, its speed was $c - v$, in accordance with the Galilean velocity transformation equation. If the state of motion of the observer or of the source has no influence on the value found for the speed of light, however, one always measures the value to be c . Likewise, the light makes the return trip after reflection from the mirror at speed c , not at speed $c + v$. Therefore, the motion of the Earth does not influence the interference pattern observed in the Michelson–Morley experiment, and a null result should be expected.

If we accept Einstein's theory of relativity, we must conclude that relative motion is unimportant when measuring the speed of light. At the same time, we must alter our commonsense notion of space and time and be prepared for some surprising consequences. As you read the pages ahead, keep in mind that our commonsense ideas are based on a lifetime of everyday experiences and not on observations of objects moving at hundreds of thousands of kilometers per second. Therefore, these results may seem strange, but that is only because we have no experience with them.

39.4 Consequences of the Special Theory of Relativity

of Relativity

As we examine some of the consequences of relativity in this section, we restrict our discussion to the concepts of simultaneity, time intervals, and lengths, all three of which are quite different in relativistic mechanics from what they are in Newtonian mechanics. In relativistic mechanics, for example, the distance between two points and the time interval between two events depend on the frame of reference in which they are measured.

Simultaneity and the Relativity of Time

A basic premise of Newtonian mechanics is that a universal time scale exists that is the same for all observers. Newton and his followers took simultaneity for granted. In his special theory of relativity, Einstein abandoned this assumption.

Einstein devised the following thought experiment to illustrate this point. A boxcar moves with uniform velocity, and two bolts of lightning strike its ends as illustrated in Figure 39.5a, leaving marks on the boxcar and on the ground. The marks on the boxcar are labeled A' and B' , and those on the ground are labeled A and B . An observer O' moving with the boxcar is midway between A' and B' , and a ground observer O is midway between A and B . The events recorded by the observers are the striking of the boxcar by the two lightning bolts.

The light signals emitted from A and B at the instant at which the two bolts strike later reach observer O at the same time as indicated in Figure 39.5b. This observer

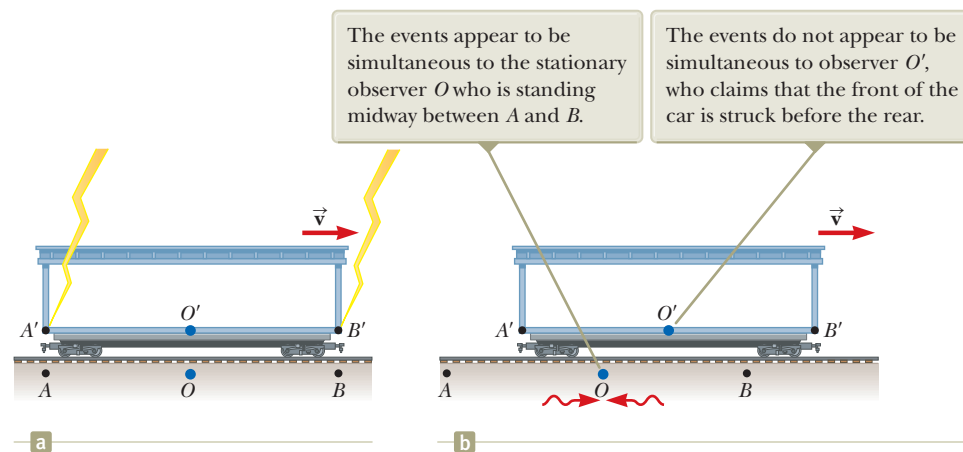


Figure 39.5 (a) Two lightning bolts strike the ends of a moving boxcar. (b) The leftward-traveling light signal has already passed O' , but the rightward-traveling signal has not yet reached O' .

Pitfall Prevention 39.2

Who's Right? You might wonder which observer in Figure 39.5 is correct concerning the two lightning strikes. *Both are correct* because the principle of relativity states that *there is no preferred inertial frame of reference*. Although the two observers reach different conclusions, both are correct in their own reference frame because the concept of simultaneity is not absolute. That, in fact, is the central point of relativity: any uniformly moving frame of reference can be used to describe events and do physics.

realizes that the signals traveled at the same speed over equal distances and so concludes that the events at A and B occurred simultaneously. Now consider the same events as viewed by observer O' . By the time the signals have reached observer O , observer O' has moved as indicated in Figure 39.5b. Therefore, the signal from B' has already swept past O' , but the signal from A' has not yet reached O' . In other words, O' sees the signal from B' before seeing the signal from A' . According to Einstein, *the two observers must find that light travels at the same speed*. Therefore, observer O' concludes that one lightning bolt strikes the front of the boxcar *before* the other one strikes the back.

This thought experiment clearly demonstrates that the two events that appear to be simultaneous to observer O do *not* appear to be simultaneous to observer O' . Simultaneity is not an absolute concept but rather one that depends on the state of motion of the observer. Einstein's thought experiment demonstrates that two observers can disagree on the simultaneity of two events. This disagreement, however, depends on the transit time of light to the observers and therefore does *not* demonstrate the deeper meaning of relativity. In relativistic analyses of high-speed situations, simultaneity is relative even when the transit time is subtracted out. In fact, in all the relativistic effects we discuss, we ignore differences caused by the transit time of light to the observers.

Time Dilation

To illustrate that observers in different inertial frames can measure different time intervals between a pair of events, consider a vehicle moving to the right with a speed v such as the boxcar shown in Figure 39.6a. A mirror is fixed to the ceiling of the vehicle, and observer O' at rest in the frame attached to the vehicle holds a flashlight a distance d below the mirror. At some instant, the flashlight emits a pulse of light directed toward the mirror (event 1), and at some later time after reflecting from the mirror, the pulse arrives back at the flashlight (event 2). Observer O' carries a clock and uses it to measure the time interval Δt_p between these two events. (The subscript p stands for *proper*, as we shall see in a moment.) We model the pulse of light as a particle under constant speed. Because the light pulse has a speed c , the time interval required for the pulse to travel from O' to the mirror and back is

$$\Delta t_p = \frac{\text{distance traveled}}{\text{speed}} = \frac{2d}{c} \quad (39.5)$$

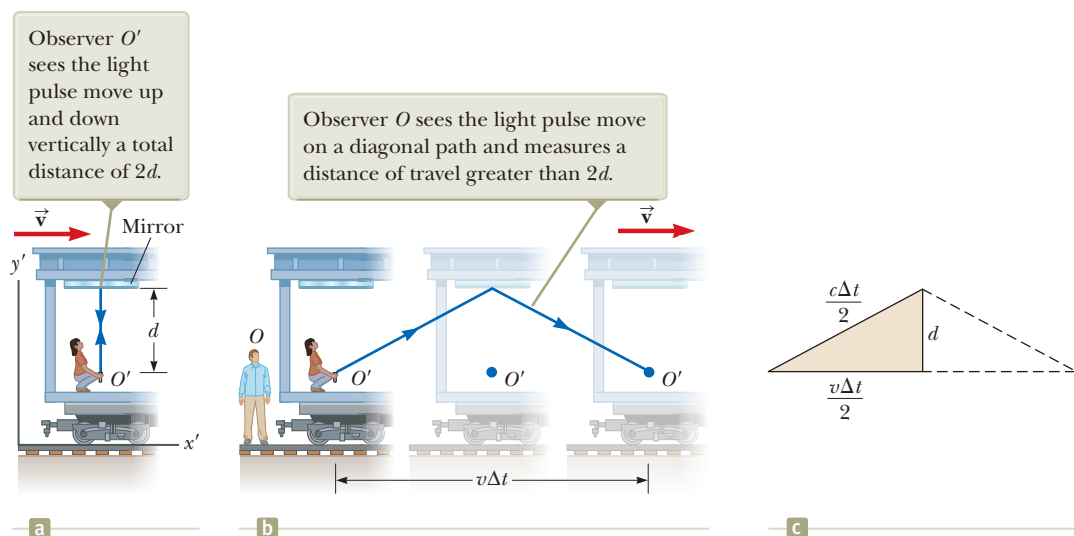


Figure 39.6 (a) A mirror is fixed to a moving vehicle, and a light pulse is sent out by observer O' at rest in the vehicle. (b) Relative to a stationary observer O standing alongside the vehicle, the mirror and O' move with a speed v . (c) The right triangle for calculating the relationship between Δt and Δt_p .

Now consider the same pair of events as viewed by observer O in a second frame at rest with respect to the ground as shown in Figure 39.6b. According to this observer, the mirror and the flashlight are moving to the right with a speed v , and as a result, the sequence of events appears entirely different. By the time the light from the flashlight reaches the mirror, the mirror has moved to the right a distance $v \Delta t/2$, where Δt is the time interval required for the light to travel from O' to the mirror and back to O' as measured by O . Observer O concludes that because of the motion of the vehicle, if the light is to hit the mirror, it must leave the flashlight at an angle with respect to the vertical direction. Comparing Figure 39.6a with Figure 39.6b, we see that the light must travel farther in part (b) than in part (a). (Notice that neither observer “knows” that he or she is moving. Each is at rest in his or her own inertial frame.)

According to the second postulate of the special theory of relativity, both observers must measure c for the speed of light. Because the light travels farther according to O , the time interval Δt measured by O is longer than the time interval Δt_p measured by O' . To obtain a relationship between these two time intervals, let's use the right triangle shown in Figure 39.6c. The Pythagorean theorem gives

$$\left(\frac{c\Delta t}{2}\right)^2 = \left(\frac{v\Delta t}{2}\right)^2 + d^2$$

Solving for Δt gives

$$\Delta t = \frac{2d}{\sqrt{c^2 - v^2}} = \frac{2d}{c\sqrt{1 - \frac{v^2}{c^2}}} \tag{39.6}$$

Because $\Delta t_p = 2d/c$, we can express this result as

$$\Delta t = \frac{\Delta t_p}{\sqrt{1 - \frac{v^2}{c^2}}} = \gamma \Delta t_p \tag{39.7}$$

◀ Time dilation

where

$$\gamma = \frac{1}{\sqrt{1 - \frac{v^2}{c^2}}} \tag{39.8}$$

Because γ is always greater than unity, Equation 39.7 shows that the time interval Δt measured by an observer moving with respect to a clock is longer than the time interval Δt_p measured by an observer at rest with respect to the clock. This effect is known as **time dilation**.

Time dilation is not observed in our everyday lives, which can be understood by considering the factor γ . This factor deviates significantly from a value of 1 only for very high speeds as shown in Figure 39.7 and Table 39.1. For example, for a speed of $0.1c$, the value of γ is 1.005. Therefore, there is a time dilation of only 0.5% at

Table 39.1 Approximate Values for γ at Various Speeds

v/c	γ
0	1
0.001 0	1.000 000 5
0.010	1.000 05
0.10	1.005
0.20	1.021
0.30	1.048
0.40	1.091
0.50	1.155
0.60	1.250
0.70	1.400
0.80	1.667
0.90	2.294
0.92	2.552
0.94	2.931
0.96	3.571
0.98	5.025
0.99	7.089
0.995	10.01
0.999	22.37

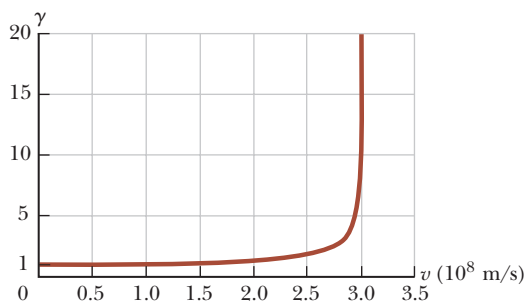


Figure 39.7 Graph of γ versus v . As the speed approaches that of light, γ increases rapidly.

one-tenth the speed of light. Speeds encountered on an everyday basis are far slower than $0.1c$, so we do not experience time dilation in normal situations.

The time interval Δt_p in Equations 39.5 and 39.7 is called the **proper time interval**. (Einstein used the German term *Eigenzeit*, which means “own-time.”) In general, the proper time interval is the time interval between two events measured by an observer *who sees the events occur at the same point in space*.

If a clock is moving with respect to you, the time interval between ticks of the moving clock is observed to be longer than the time interval between ticks of an identical clock in your reference frame. Therefore, it is often said that a moving clock is measured to run more slowly than a clock in your reference frame by a factor γ . We can generalize this result by stating that all physical processes, including mechanical, chemical, and biological ones, are measured to slow down when those processes occur in a frame moving with respect to the observer. For example, the heartbeat of an astronaut moving through space keeps time with a clock inside the spacecraft. Both the astronaut’s clock and heartbeat are measured to slow down relative to a clock back on the Earth (although the astronaut would have no sensation of life slowing down in the spacecraft).

Quick Quiz 39.3 Suppose the observer O' on the train in Figure 39.6 aims her flashlight at the far wall of the boxcar and turns it on and off, sending a pulse of light toward the far wall. Both O' and O measure the time interval between when the pulse leaves the flashlight and when it hits the far wall. Which observer measures the proper time interval between these two events? (a) O' (b) O (c) both observers (d) neither observer

Quick Quiz 39.4 A crew on a spacecraft watches a movie that is two hours long. The spacecraft is moving at high speed through space. Does an Earth-based observer watching the movie screen on the spacecraft through a powerful telescope measure the duration of the movie to be (a) longer than, (b) shorter than, or (c) equal to two hours?

Pitfall Prevention 39.3

The Proper Time Interval It is *very* important in relativistic calculations to correctly identify the observer who measures the proper time interval. The proper time interval between two events is always the time interval measured by an observer for whom the two events take place at the same position.

Time dilation is a very real phenomenon that has been verified by various experiments involving natural clocks. One experiment reported by J. C. Hafele and R. E. Keating provided direct evidence of time dilation.⁴ Time intervals measured with four cesium atomic clocks in jet flight were compared with time intervals measured by Earth-based reference atomic clocks. To compare these results with theory, many factors had to be considered, including periods of speeding up and slowing down relative to the Earth, variations in direction of travel, and the weaker gravitational field experienced by the flying clocks than that experienced by the Earth-based clock. The results were in good agreement with the predictions of the special theory of relativity and were explained in terms of the relative motion between the Earth and the jet aircraft. In their paper, Hafele and Keating stated that “relative to the atomic time scale of the U.S. Naval Observatory, the flying clocks lost 59 ± 10 ns during the eastward trip and gained 273 ± 7 ns during the westward trip.”

Another interesting example of time dilation involves the observation of *muons*, unstable elementary particles that have a charge equal to that of the electron and a mass 207 times that of the electron. Muons can be produced by the collision of cosmic radiation with atoms high in the atmosphere. Slow-moving muons in the laboratory have a lifetime that is measured to be the proper time interval $\Delta t_p = 2.2 \mu\text{s}$. If we take $2.2 \mu\text{s}$ as the average lifetime of a muon and assume that muons created by cosmic radiation have a speed close to the speed of light, we find that these particles can travel a distance of approximately $(3.0 \times 10^8 \text{ m/s})(2.2 \times 10^{-6} \text{ s}) \approx 6.6 \times 10^2 \text{ m}$ before they decay (Fig. 39.8a). Hence, they are unlikely to reach the

⁴J. C. Hafele and R. E. Keating, “Around the World Atomic Clocks: Relativistic Time Gains Observed,” *Science* **177**:168, 1972.

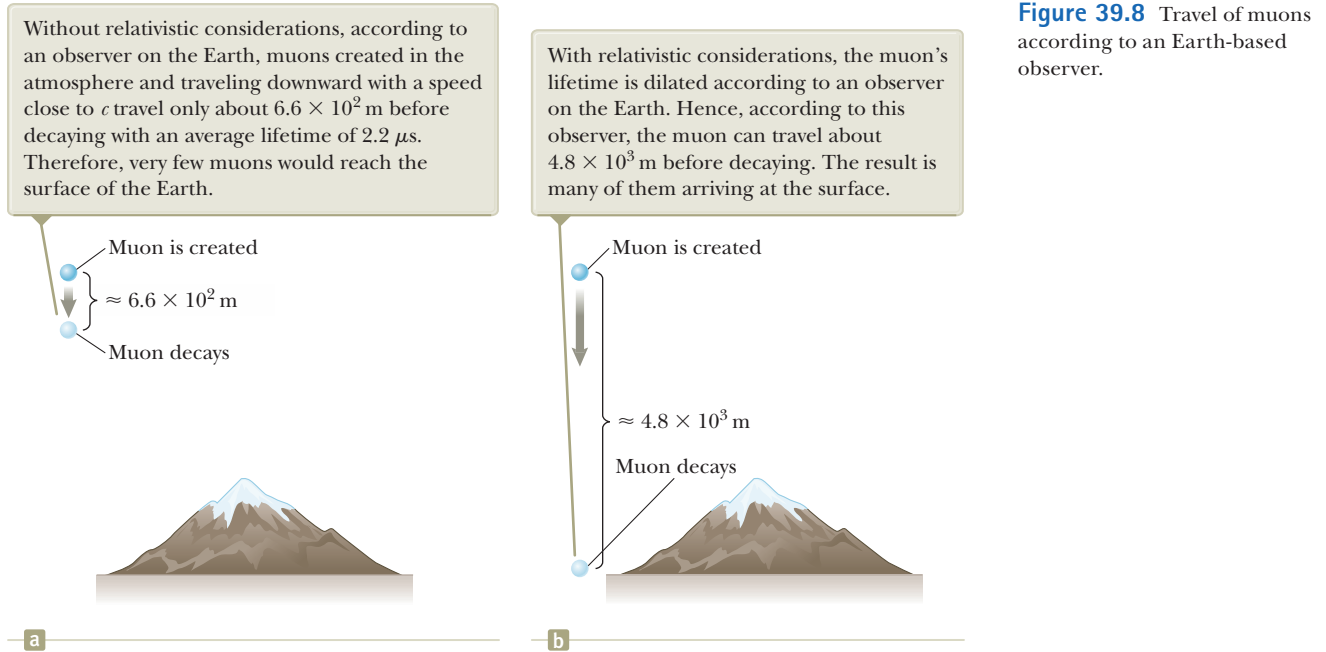


Figure 39.8 Travel of muons according to an Earth-based observer.

surface of the Earth from high in the atmosphere where they are produced. Experiments show, however, that a large number of muons *do* reach the surface. The phenomenon of time dilation explains this effect. As measured by an observer on the Earth, the muons have a dilated lifetime equal to $\gamma \Delta t_p$. For example, for $v = 0.99c$, $\gamma \approx 7.1$, and $\gamma \Delta t_p \approx 16 \mu\text{s}$. Hence, the average distance traveled by the muons in this time interval as measured by an observer on the Earth is approximately $(0.99)(3.0 \times 10^8 \text{ m/s})(16 \times 10^{-6} \text{ s}) \approx 4.8 \times 10^3 \text{ m}$ as indicated in Figure 39.8b.

In 1976, at the laboratory of the European Council for Nuclear Research (CERN) in Geneva, muons injected into a large storage ring reached speeds of approximately $0.9994c$. Electrons produced by the decaying muons were detected by counters around the ring, enabling scientists to measure the decay rate and hence the muon lifetime. The lifetime of the moving muons was measured to be approximately 30 times as long as that of the stationary muon, in agreement with the prediction of relativity to within two parts in a thousand.

Example 39.1 What Is the Period of the Pendulum?

The period of a pendulum is measured to be 3.00 s in the reference frame of the pendulum. What is the period when measured by an observer moving at a speed of $0.960c$ relative to the pendulum?

SOLUTION

Conceptualize Let's change frames of reference. Instead of the observer moving at $0.960c$, we can take the equivalent point of view that the observer is at rest and the pendulum is moving at $0.960c$ past the stationary observer. Hence, the pendulum is an example of a clock moving at high speed with respect to an observer.

Categorize Based on the Conceptualize step, we can categorize this example as a substitution problem involving relativistic time dilation.

The proper time interval, measured in the rest frame of the pendulum, is $\Delta t_p = 3.00 \text{ s}$.

Use Equation 39.7 to find the dilated time interval:

$$\begin{aligned} \Delta t &= \gamma \Delta t_p = \frac{1}{\sqrt{1 - \frac{(0.960c)^2}{c^2}}} \Delta t_p = \frac{1}{\sqrt{1 - 0.9216}} \Delta t_p \\ &= 3.57(3.00 \text{ s}) = \mathbf{10.7 \text{ s}} \end{aligned}$$

continued

39.1 continued

This result shows that a moving pendulum is indeed measured to take longer to complete a period than a pendulum at rest does. The period increases by a factor of $\gamma = 3.57$.

WHAT IF? What if the speed of the observer increases by 4.00%? Does the dilated time interval increase by 4.00%?

Answer Based on the highly nonlinear behavior of γ as a function of v in Figure 39.7, we would guess that the increase in Δt would be different from 4.00%.

Find the new speed if it increases by 4.00%:

$$v_{\text{new}} = (1.040\ 0)(0.960\ c) = 0.998\ 4c$$

Perform the time dilation calculation again:

$$\begin{aligned}\Delta t &= \gamma \Delta t_p = \frac{1}{\sqrt{1 - \frac{(0.998\ 4c)^2}{c^2}}} \Delta t_p = \frac{1}{\sqrt{1 - 0.996\ 8}} \Delta t_p \\ &= 17.68(3.00\ \text{s}) = 53.1\ \text{s}\end{aligned}$$

Therefore, the 4.00% increase in speed results in almost a 400% increase in the dilated time!

Example 39.2 How Long Was Your Trip?

Suppose you are driving your car on a business trip and are traveling at 30 m/s. Your boss, who is waiting at your destination, expects the trip to take 5.0 h. When you arrive late, your excuse is that the clock in your car registered the passage of 5.0 h but that you were driving fast and so your clock ran more slowly than the clock in your boss's office. If your car clock actually did indicate a 5.0-h trip, how much time passed on your boss's clock, which was at rest on the Earth?

SOLUTION

Conceptualize The observer is your boss standing stationary on the Earth. The clock is in your car, moving at 30 m/s with respect to your boss.

Categorize The low speed of 30 m/s suggests we might categorize this problem as one in which we use classical concepts and equations. Based on the problem statement that the moving clock runs more slowly than a stationary clock, however, we categorize this problem as one involving time dilation.

Analyze The proper time interval, measured in the rest frame of the car, is $\Delta t_p = 5.0\ \text{h}$.

Use Equation 39.8 to evaluate γ :

$$\gamma = \frac{1}{\sqrt{1 - \frac{v^2}{c^2}}} = \frac{1}{\sqrt{1 - \frac{(3.0 \times 10^1\ \text{m/s})^2}{(3.0 \times 10^8\ \text{m/s})^2}}} = \frac{1}{\sqrt{1 - 10^{-14}}}$$

If you try to determine this value on your calculator, you will probably obtain $\gamma = 1$. Instead, perform a binomial expansion:

$$\gamma = (1 - 10^{-14})^{-1/2} \approx 1 + \frac{1}{2}(10^{-14}) = 1 + 5.0 \times 10^{-15}$$

Use Equation 39.7 to find the dilated time interval measured by your boss:

$$\begin{aligned}\Delta t &= \gamma \Delta t_p = (1 + 5.0 \times 10^{-15})(5.0\ \text{h}) \\ &= 5.0\ \text{h} + 2.5 \times 10^{-14}\ \text{h} = \mathbf{5.0\ \text{h} + 0.090\ \text{ns}}\end{aligned}$$

Finalize Your boss's clock would be only 0.090 ns ahead of your car clock. You might want to think of another excuse!

The Twin Paradox

An intriguing consequence of time dilation is the *twin paradox* (Fig. 39.9). Consider an experiment involving a set of twins named Speedo and Goslo. When they are 20 years old, Speedo, the more adventuresome of the two, sets out on an epic journey from the Earth to Planet X, located 20 light-years away. One light-year (ly) is the distance light travels through free space in 1 year. Furthermore, Speedo's

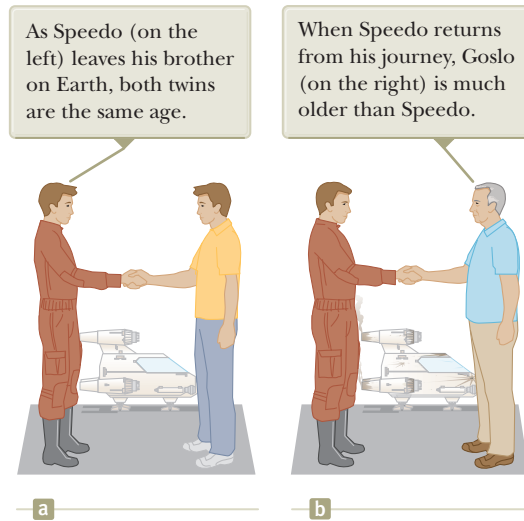


Figure 39.9 The twin paradox. Speedo takes a journey to a star 20 light-years away and returns to the Earth.

spacecraft is capable of reaching a speed of $0.95c$ relative to the inertial frame of his twin brother back home on the Earth. After reaching Planet X, Speedo becomes homesick and immediately returns to the Earth at the same speed $0.95c$. Upon his return, Speedo is shocked to discover that Goslo has aged 42 years and is now 62 years old. Speedo, on the other hand, has aged only 13 years.

The paradox is *not* that the twins have aged at different rates. Here is the apparent paradox. From Goslo's frame of reference, he was at rest while his brother traveled at a high speed away from him and then came back. According to Speedo, however, he himself remained stationary while Goslo and the Earth raced away from him and then headed back. Therefore, we might expect Speedo to claim that Goslo ages more slowly than himself. The situation appears to be symmetrical from either twin's point of view. Which twin *actually* ages more slowly?

The situation is actually not symmetrical. Consider a third observer moving at a constant speed relative to Goslo. According to the third observer, Goslo never changes inertial frames. Goslo's speed relative to the third observer is always the same. The third observer notes, however, that Speedo accelerates during his journey when he slows down and starts moving back toward the Earth, *changing reference frames in the process*. From the third observer's perspective, there is something very different about the motion of Goslo when compared to Speedo. Therefore, there is no paradox: only Goslo, who is always in a single inertial frame, can make correct predictions based on special relativity. Goslo finds that instead of aging 42 years, Speedo ages only $(1 - v^2/c^2)^{1/2}(42 \text{ years}) = 13 \text{ years}$. Of these 13 years, Speedo spends 6.5 years traveling to Planet X and 6.5 years returning.

- Quick Quiz 39.5** Suppose astronauts are paid according to the amount of time they spend traveling in space. After a long voyage traveling at a speed approaching c , would a crew rather be paid according to (a) an Earth-based clock, (b) their spacecraft's clock, or (c) either clock?

Length Contraction

The measured distance between two points in space also depends on the frame of reference of the observer. The **proper length** L_p of an object is the length measured by an observer *at rest relative to the object*. The length of an object measured by someone in a reference frame that is moving with respect to the object is always less than the proper length. This effect is known as **length contraction**.

To understand length contraction, consider a spacecraft traveling with a speed v from one star to another. There are two observers: one on the Earth and the other in the spacecraft. The observer at rest on the Earth (and also assumed to be at rest with

Pitfall Prevention 39.4

The Proper Length As with the proper time interval, it is *very* important in relativistic calculations to correctly identify the observer who measures the proper length. The proper length between two points in space is always the length measured by an observer at rest with respect to the points. Often, the proper time interval and the proper length are *not* measured by the same observer.

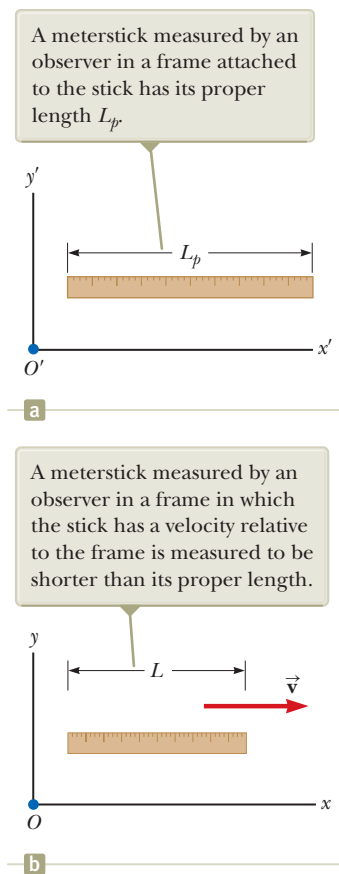
Length contraction ▶

Figure 39.10 The length of a meterstick is measured by two observers.

respect to the two stars) measures the distance between the stars to be the proper length L_p . According to this observer, the time interval required for the spacecraft to complete the voyage is given by the particle under constant velocity model as $\Delta t = L_p/v$. The passages of the two stars by the spacecraft occur at the same position for the space traveler. Therefore, the space traveler measures the proper time interval Δt_p . Because of time dilation, the proper time interval is related to the Earth-measured time interval by $\Delta t_p = \Delta t/\gamma$. Because the space traveler reaches the second star in the time Δt_p , he or she concludes that the distance L between the stars is

$$L = v \Delta t_p = v \frac{\Delta t}{\gamma}$$

Because the proper length is $L_p = v \Delta t$, we see that

$$L = \frac{L_p}{\gamma} = L_p \sqrt{1 - \frac{v^2}{c^2}} \quad (39.9)$$

where $\sqrt{1 - v^2/c^2}$ is a factor less than unity. If an object has a proper length L_p when it is measured by an observer at rest with respect to the object, its length L when it moves with speed v in a direction parallel to its length is measured to be shorter according to Equation 39.9.

For example, suppose a meterstick moves past a stationary Earth-based observer with speed v as in Figure 39.10. The length of the meterstick as measured by an observer in a frame attached to the stick is the proper length L_p shown in Figure 39.10a. The length of the stick L measured by the Earth observer is shorter than L_p by the factor $(1 - v^2/c^2)^{1/2}$ as suggested in Figure 39.10b. Notice that length contraction takes place only along the direction of motion.

The proper length and the proper time interval are defined differently. The proper length is measured by an observer for whom the endpoints of the length remain fixed in space. The proper time interval is measured by someone for whom the two events take place at the same position in space. As an example of this point, let's return to the decaying muons moving at speeds close to the speed of light. An observer in the muon's reference frame measures the proper lifetime, whereas an Earth-based observer measures the proper length (the distance between the creation point and the decay point in Fig. 39.8b). In the muon's reference frame, there is no time dilation, but the distance of travel to the surface is shorter when measured in this frame. Likewise, in the Earth observer's reference frame, there is time dilation, but the distance of travel is measured to be the proper length. Therefore, when calculations on the muon are performed in both frames, the outcome of the experiment in one frame is the same as the outcome in the other frame: more muons reach the surface than would be predicted without relativistic effects.

Quick Quiz 39.6 You are packing for a trip to another star. During the journey, you will be traveling at $0.99c$. You are trying to decide whether you should buy smaller sizes of your clothing because you will be thinner on your trip due to length contraction. You also plan to save money by reserving a smaller cabin to sleep in because you will be shorter when you lie down. Should you (a) buy smaller sizes of clothing, (b) reserve a smaller cabin, (c) do neither of these things, or (d) do both of these things?

Quick Quiz 39.7 You are observing a spacecraft moving away from you. You measure it to be shorter than when it was at rest on the ground next to you. You also see a clock through the spacecraft window, and you observe that the passage of time on the clock is measured to be slower than that of the watch on your wrist. Compared with when the spacecraft was on the ground, what do you measure if the spacecraft turns around and comes *toward* you at the same speed? (a) The spacecraft is measured to be longer, and the clock runs faster. (b) The spacecraft is measured to be longer, and the clock runs slower. (c) The spacecraft is

- ⋮ measured to be shorter, and the clock runs faster. (d) The spacecraft is mea-
- sured to be shorter, and the clock runs slower.

Space–Time Graphs

It is sometimes helpful to represent a physical situation with a **space–time graph**, in which ct is the ordinate and position x is the abscissa. The twin paradox is displayed in such a graph in Figure 39.11 from Goslo’s point of view. A path through space–time is called a **world-line**. At the origin, the world-lines of Speedo (blue) and Goslo (green) coincide because the twins are in the same location at the same time. After Speedo leaves on his trip, his world-line diverges from that of his brother. Goslo’s world-line is vertical because he remains fixed in location. At Goslo and Speedo’s reunion, the two world-lines again come together. It would be impossible for Speedo to have a world-line that crossed the path of a light beam that left the Earth when he did. To do so would require him to have a speed greater than c (which, as shown in Sections 39.6 and 39.7, is not possible).

World-lines for light beams are diagonal lines on space–time graphs, typically drawn at 45° to the right or left of vertical (assuming the x and ct axes have the same scales), depending on whether the light beam is traveling in the direction of increasing or decreasing x . All possible future events for Goslo and Speedo lie above the x axis and between the red-brown lines in Figure 39.11 because neither twin can travel faster than light. The only past events that Goslo and Speedo could have experienced occur between two similar 45° world-lines that approach the origin from below the x axis.

If Figure 39.11 is rotated about the ct axis, the red-brown lines sweep out a cone, called the **light cone**, which generalizes Figure 39.11 to two space dimensions. The y axis can be imagined coming out of the page. All future events for an observer at the origin must lie within the light cone. We can imagine another rotation that would generalize the light cone to three space dimensions to include z , but because of the requirement for four dimensions (three space dimensions and time), we cannot represent this situation in a two-dimensional drawing on paper.

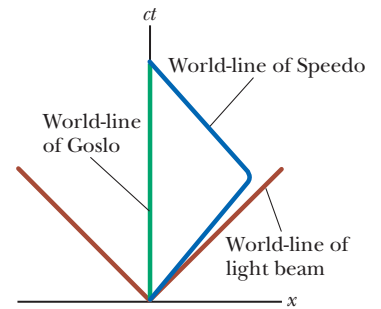


Figure 39.11 The twin paradox on a space–time graph. The twin who stays on the Earth has a world-line along the ct axis (green). The path of the traveling twin through space–time is represented by a world-line that changes direction (blue). The red-brown lines are world-lines for light beams traveling in the positive x direction (on the right) or the negative x direction (on the left).

Example 39.3 A Voyage to Sirius AM

An astronaut takes a trip to Sirius, which is located a distance of 8 light-years from the Earth. The astronaut measures the time of the one-way journey to be 6 years. If the spaceship moves at a constant speed of $0.8c$, how can the 8-ly distance be reconciled with the 6-year trip time measured by the astronaut?

SOLUTION

Conceptualize An observer on the Earth measures light to require 8 years to travel between Sirius and the Earth. The astronaut measures a time interval for his travel of only 6 years. Is the astronaut traveling faster than light?

Categorize Because the astronaut is measuring a length of space between the Earth and Sirius that is in motion with respect to her, we categorize this example as a length contraction problem. We also model the astronaut as a *particle under constant velocity*.

Analyze The distance of 8 ly represents the proper length from the Earth to Sirius measured by an observer on the Earth seeing both objects nearly at rest.

Calculate the contracted length measured by the astronaut using Equation 39.9:

$$L = \frac{8 \text{ ly}}{\gamma} = (8 \text{ ly}) \sqrt{1 - \frac{v^2}{c^2}} = (8 \text{ ly}) \sqrt{1 - \frac{(0.8c)^2}{c^2}} = 5 \text{ ly}$$

Use the particle under constant velocity model to find the travel time measured on the astronaut’s clock:

$$\Delta t = \frac{L}{v} = \frac{5 \text{ ly}}{0.8c} = \frac{5 \text{ ly}}{0.8(1 \text{ ly/yr})} = 6 \text{ yr}$$

continued

39.3 continued

Finalize Notice that we have used the value for the speed of light as $c = 1 \text{ ly/yr}$. The trip takes a time interval shorter than 8 years for the astronaut because, to her, the distance between the Earth and Sirius is measured to be shorter.

WHAT IF? What if this trip is observed with a very powerful telescope by a technician in Mission Control on the Earth? At what time will this technician *see* that the astronaut has arrived at Sirius?

Answer The time interval the technician measures for the astronaut to arrive is

$$\Delta t = \frac{L_p}{v} = \frac{8 \text{ ly}}{0.8c} = 10 \text{ yr}$$

For the technician to *see* the arrival, the light from the scene of the arrival must travel back to the Earth and enter the telescope. This travel requires a time interval of

$$\Delta t = \frac{L_p}{v} = \frac{8 \text{ ly}}{c} = 8 \text{ yr}$$

Therefore, the technician sees the arrival after $10 \text{ yr} + 8 \text{ yr} = 18 \text{ yr}$. If the astronaut immediately turns around and comes back home, she arrives, according to the technician, 20 years after leaving, only 2 years *after the technician saw her arrive!* In addition, the astronaut would have aged by only 12 years.

Example 39.4 The Pole-in-the-Barn Paradox AM

The twin paradox, discussed earlier, is a classic “paradox” in relativity. Another classic “paradox” is as follows. Suppose a runner moving at $0.75c$ carries a horizontal pole 15 m long toward a barn that is 10 m long. The barn has front and rear doors that are initially open. An observer on the ground can instantly and simultaneously close and open the two doors by remote control. When the runner and the pole are inside the barn, the ground observer closes and then opens both doors so that the runner and pole are momentarily captured inside the barn and then proceed to exit the barn from the back doorway. Do both the runner and the ground observer agree that the runner makes it safely through the barn?

SOLUTION

Conceptualize From your everyday experience, you would be surprised to see a 15-m pole fit inside a 10-m barn, but we are becoming used to surprising results in relativistic situations.

Categorize The pole is in motion with respect to the ground observer so that the observer measures its length to be contracted, whereas the stationary barn has a proper length of 10 m. We categorize this example as a length contraction problem. The runner carrying the pole is modeled as a *particle under constant velocity*.

Analyze Use Equation 39.9 to find the contracted length of the pole according to the ground observer:

$$L_{\text{pole}} = L_p \sqrt{1 - \frac{v^2}{c^2}} = (15 \text{ m}) \sqrt{1 - (0.75)^2} = 9.9 \text{ m}$$

Therefore, the ground observer measures the pole to be slightly shorter than the barn and there is no problem with momentarily capturing the pole inside it. The “paradox” arises when we consider the runner’s point of view.

Use Equation 39.9 to find the contracted length of the barn according to the running observer:

$$L_{\text{barn}} = L_p \sqrt{1 - \frac{v^2}{c^2}} = (10 \text{ m}) \sqrt{1 - (0.75)^2} = 6.6 \text{ m}$$

Because the pole is in the rest frame of the runner, the runner measures it to have its proper length of 15 m. Now the situation looks even worse: How can a 15-m pole fit inside a 6.6-m barn? Although this question is the classic one that is often asked, it is not the question we have asked because it is not the important one. We asked, “*Does the runner make it safely through the barn?*”

The resolution of the “paradox” lies in the relativity of simultaneity. The closing of the two doors is measured to be simultaneous by the ground observer. Because the doors are at different positions, however, they do not close simulta-

39.4 continued

neously as measured by the runner. The rear door closes and then opens first, allowing the leading end of the pole to exit. The front door of the barn does not close until the trailing end of the pole passes by.

We can analyze this “paradox” using a space–time graph. Figure 39.12a is a space–time graph from the ground observer’s point of view. We choose $x = 0$ as the position of the front doorway of the barn and $t = 0$ as the instant at which the leading end of the pole is located at the front doorway of the barn. The world-lines for the two doorways of the barn are separated by 10 m and are vertical because the barn is not moving relative to this observer. For the pole, we follow two tilted world-lines, one for each end of the moving pole. These world-lines are 9.9 m apart horizontally, which is the contracted length seen by the ground observer. As seen in Figure 39.12a, the pole is entirely within the barn at some time.

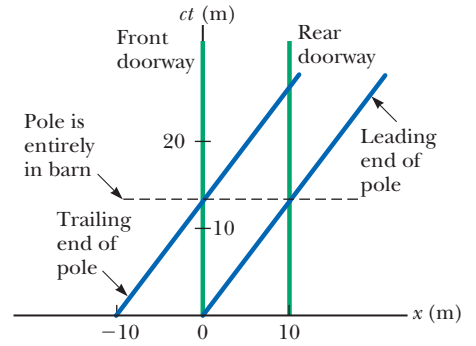
Figure 39.12b shows the space–time graph according to the runner. Here, the world-lines for the pole are separated by 15 m and are vertical because the pole is at rest in the runner’s frame of reference. The barn is hurtling *toward* the runner, so the world-lines for the front and rear doorways of the barn are tilted to the left. The world-lines for the front and rear doorways of the barn are separated by 6.6 m, the contracted length as seen by the runner. The leading end of the pole leaves the rear doorway of the barn long before the trailing end of the pole enters the barn. Therefore, the opening of the rear door occurs before the closing of the front door.

From the ground observer’s point of view, use the particle under constant velocity model to find the time after $t = 0$ at which the trailing end of the pole enters the barn:

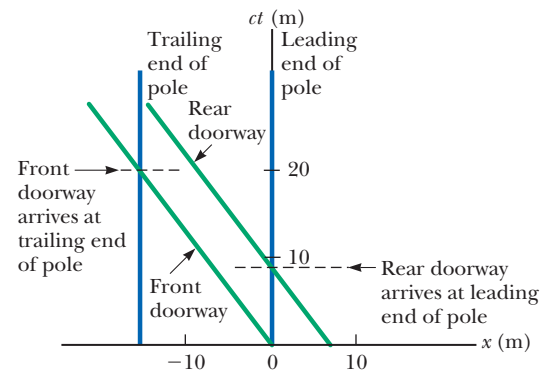
From the runner’s point of view, use the particle under constant velocity model to find the time at which the leading end of the pole leaves the barn:

Find the time at which the trailing end of the pole enters the front door of the barn:

Finalize From Equation (1), the pole should be completely inside the barn at a time corresponding to $ct = 13.2$ m. This situation is consistent with the point on the ct axis in Figure 39.12a where the pole is inside the barn. From Equation (2), the leading end of the pole leaves the barn at $ct = 8.8$ m. This situation is consistent with the point on the ct axis in Figure 39.12b where the rear doorway of the barn arrives at the leading end of the pole. Equation (3) gives $ct = 20$ m, which agrees with the instant shown in Figure 39.12b at which the front doorway of the barn arrives at the trailing end of the pole.



a



b

Figure 39.12 (Example 39.4) Space–time graphs for the pole-in-the-barn paradox (a) from the ground observer’s point of view and (b) from the runner’s point of view.

$$(1) \quad t = \frac{\Delta x}{v} = \frac{9.9 \text{ m}}{0.75c} = \frac{13.2 \text{ m}}{c}$$

$$(2) \quad t = \frac{\Delta x}{v} = \frac{6.6 \text{ m}}{0.75c} = \frac{8.8 \text{ m}}{c}$$

$$(3) \quad t = \frac{\Delta x}{v} = \frac{15 \text{ m}}{0.75c} = \frac{20 \text{ m}}{c}$$

The Relativistic Doppler Effect

Another important consequence of time dilation is the shift in frequency observed for light emitted by atoms in motion as opposed to light emitted by atoms at rest. This phenomenon, known as the Doppler effect, was introduced in Chapter 17 as it pertains to sound waves. In the case of sound, the velocity v_s of the source with

respect to the medium of propagation can be distinguished from the velocity v_o of the observer with respect to the medium (the air). Light waves must be analyzed differently, however, because *they require no medium of propagation*, and no method exists for distinguishing the velocity of a light source from the velocity of the observer. The only measurable velocity is the *relative velocity* v between the source and the observer.

If a light source and an observer approach each other with a relative speed v , the frequency f' measured by the observer is

$$f' = \frac{\sqrt{1 + v/c}}{\sqrt{1 - v/c}} f \quad (39.10)$$

where f is the frequency of the source measured in its rest frame. This relativistic Doppler shift equation, unlike the Doppler shift equation for sound, depends only on the relative speed v of the source and observer and holds for relative speeds as great as c . As you might expect, the equation predicts that $f' > f$ when the source and observer approach each other. We obtain the expression for the case in which the source and observer recede from each other by substituting negative values for v in Equation 39.10.

The most spectacular and dramatic use of the relativistic Doppler effect is the measurement of shifts in the frequency of light emitted by a moving astronomical object such as a galaxy. Light emitted by atoms and normally found in the extreme violet region of the spectrum is shifted toward the red end of the spectrum for atoms in other galaxies, indicating that these galaxies are *receding* from us. American astronomer Edwin Hubble (1889–1953) performed extensive measurements of this *red shift* to confirm that most galaxies are moving away from us, indicating that the Universe is expanding.

39.5 The Lorentz Transformation Equations

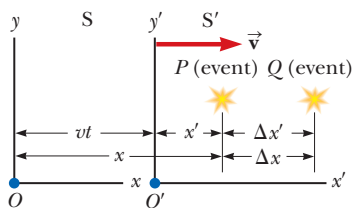


Figure 39.13 Events occur at points P and Q and are observed by an observer at rest in the S frame and another in the S' frame, which is moving to the right with a speed v .

Suppose two events occur at points P and Q and are reported by two observers, one at rest in a frame S and another in a frame S' that is moving to the right with speed v as in Figure 39.13. The observer in S reports the events with space–time coordinates (x, y, z, t) , and the observer in S' reports the same events using the coordinates (x', y', z', t') . Equation 39.1 predicts that the distance between the two points in space at which the events occur does not depend on motion of the observer: $\Delta x = \Delta x'$. Because this prediction is contradictory to the notion of length contraction, the Galilean transformation is not valid when v approaches the speed of light. In this section, we present the correct transformation equations that apply for all speeds in the range $0 < v < c$.

The equations that are valid for all speeds and that enable us to transform coordinates from S to S' are the **Lorentz transformation equations**:

$$x' = \gamma(x - vt) \quad y' = y \quad z' = z \quad t' = \gamma\left(t - \frac{v}{c^2}x\right) \quad (39.11)$$

These transformation equations were developed by Hendrik A. Lorentz (1853–1928) in 1890 in connection with electromagnetism. It was Einstein, however, who recognized their physical significance and took the bold step of interpreting them within the framework of the special theory of relativity.

Notice the difference between the Galilean and Lorentz time equations. In the Galilean case, $t = t'$. In the Lorentz case, however, the value for t' assigned to an event by an observer O' in the S' frame in Figure 39.13 depends both on the time t and on the coordinate x as measured by an observer O in the S frame, which is consistent with the notion that an event is characterized by four space–time coordinates (x, y, z, t) . In other words, in relativity, space and time are *not* separate concepts but rather are closely interwoven with each other.

Lorentz transformation ►
for $S \rightarrow S'$

If you wish to transform coordinates in the S' frame to coordinates in the S frame, simply replace v by $-v$ and interchange the primed and unprimed coordinates in Equations 39.11:

$$x = \gamma(x' + vt') \quad y = y' \quad z = z' \quad t = \gamma\left(t' + \frac{v}{c^2}x'\right) \quad (39.12)$$

◀ Inverse Lorentz transformation for $S' \rightarrow S$

When $v \ll c$, the Lorentz transformation equations should reduce to the Galilean equations. As v approaches zero, $v/c \ll 1$; therefore, $\gamma \rightarrow 1$ and Equations 39.11 indeed reduce to the Galilean space–time transformation equations in Equation 39.1.

In many situations, we would like to know the difference in coordinates between two events or the time interval between two events as seen by observers O and O' . From Equations 39.11 and 39.12, we can express the differences between the four variables x , x' , t , and t' in the form

$$\left. \begin{aligned} \Delta x' &= \gamma(\Delta x - v \Delta t) \\ \Delta t' &= \gamma\left(\Delta t - \frac{v}{c^2} \Delta x\right) \end{aligned} \right\} S \rightarrow S' \quad (39.13)$$

$$\left. \begin{aligned} \Delta x &= \gamma(\Delta x' + v \Delta t') \\ \Delta t &= \gamma\left(\Delta t' + \frac{v}{c^2} \Delta x'\right) \end{aligned} \right\} S' \rightarrow S \quad (39.14)$$

where $\Delta x' = x'_2 - x'_1$ and $\Delta t' = t'_2 - t'_1$ are the differences measured by observer O' and $\Delta x = x_2 - x_1$ and $\Delta t = t_2 - t_1$ are the differences measured by observer O . (We have not included the expressions for relating the y and z coordinates because they are unaffected by motion along the x direction.⁵)

Example 39.5 Simultaneity and Time Dilation Revisited

(A) Use the Lorentz transformation equations in difference form to show that simultaneity is not an absolute concept.

SOLUTION

Conceptualize Imagine two events that are simultaneous and separated in space as measured in the S' frame such that $\Delta t' = 0$ and $\Delta x' \neq 0$. These measurements are made by an observer O' who is moving with speed v relative to O .

Categorize The statement of the problem tells us to categorize this example as one involving the use of the Lorentz transformation.

Analyze From the expression for Δt given in Equation 39.14, find the time interval Δt measured by observer O :

$$\Delta t = \gamma\left(\Delta t' + \frac{v}{c^2} \Delta x'\right) = \gamma\left(0 + \frac{v}{c^2} \Delta x'\right) = \gamma \frac{v}{c^2} \Delta x'$$

Finalize The time interval for the same two events as measured by O is nonzero, so the events do not appear to be simultaneous to O .

(B) Use the Lorentz transformation equations in difference form to show that a moving clock is measured to run more slowly than a clock that is at rest with respect to an observer.

SOLUTION

Conceptualize Imagine that observer O' carries a clock that he uses to measure a time interval $\Delta t'$. He finds that two events occur at the same place in his reference frame ($\Delta x' = 0$) but at different times ($\Delta t' \neq 0$). Observer O' is moving with speed v relative to O . *continued*

⁵Although relative motion of the two frames along the x axis does not change the y and z coordinates of an object, it does change the y and z velocity components of an object moving in either frame as noted in Section 39.6.

39.5 continued

Categorize The statement of the problem tells us to categorize this example as one involving the use of the Lorentz transformation.

Analyze From the expression for Δt given in Equation 39.14, find the time interval Δt measured by observer O :

$$\Delta t = \gamma \left(\Delta t' + \frac{v}{c^2} \Delta x' \right) = \gamma \left[\Delta t' + \frac{v}{c^2} (0) \right] = \gamma \Delta t'$$

Finalize This result is the equation for time dilation found earlier (Eq. 39.7), where $\Delta t' = \Delta t_p$ is the proper time interval measured by the clock carried by observer O' . Therefore, O measures the moving clock to run slow.

39.6 The Lorentz Velocity Transformation Equations

Suppose two observers in relative motion with respect to each other are both observing an object's motion. Previously, we defined an event as occurring at an instant of time. Now let's interpret the "event" as the object's motion. We know that the Galilean velocity transformation (Eq. 39.2) is valid for low speeds. How do the observers' measurements of the velocity of the object relate to each other if the speed of the object or the relative speed of the observers is close to that of light? Once again, S' is our frame moving at a speed v relative to S . Suppose an object has a velocity component u'_x measured in the S' frame, where

$$u'_x = \frac{dx'}{dt'} \quad (39.15)$$

Using Equation 39.11, we have

$$dx' = \gamma(dx - v dt)$$

$$dt' = \gamma \left(dt - \frac{v}{c^2} dx \right)$$

Substituting these values into Equation 39.15 gives

$$u'_x = \frac{dx - v dt}{dt - \frac{v}{c^2} dx} = \frac{\frac{dx}{dt} - v}{1 - \frac{v}{c^2} \frac{dx}{dt}}$$

The term dx/dt , however, is simply the velocity component u_x of the object measured by an observer in S , so this expression becomes

Lorentz velocity transformation for $S \rightarrow S'$ ▶

$$u'_x = \frac{u_x - v}{1 - \frac{u_x v}{c^2}} \quad (39.16)$$

If the object has velocity components along the y and z axes, the components as measured by an observer in S' are

$$u'_y = \frac{u_y}{\gamma \left(1 - \frac{u_x v}{c^2} \right)} \quad \text{and} \quad u'_z = \frac{u_z}{\gamma \left(1 - \frac{u_x v}{c^2} \right)} \quad (39.17)$$

Notice that u'_y and u'_z do not contain the parameter v in the numerator because the relative velocity is along the x axis.

When v is much smaller than c (the nonrelativistic case), the denominator of Equation 39.16 approaches unity and so $u'_x \approx u_x - v$, which is the Galilean veloc-

ity transformation equation. In another extreme, when $u_x = c$, Equation 39.16 becomes

$$u'_x = \frac{c - v}{1 - \frac{cv}{c^2}} = \frac{c\left(1 - \frac{v}{c}\right)}{1 - \frac{v}{c}} = c$$

This result shows that a speed measured as c by an observer in S is also measured as c by an observer in S' , independent of the relative motion of S and S' . This conclusion is consistent with Einstein's second postulate: the speed of light must be c relative to all inertial reference frames. Furthermore, we find that the speed of an object can never be measured as larger than c . That is, the speed of light is the ultimate speed. We shall return to this point later.

To obtain u_x in terms of u'_x , we replace v by $-v$ in Equation 39.16 and interchange the roles of u_x and u'_x :

$$u_x = \frac{u'_x + v}{1 + \frac{u'_x v}{c^2}} \quad (39.18)$$

- Quick Quiz 39.8** You are driving on a freeway at a relativistic speed. (i) Straight ahead of you, a technician standing on the ground turns on a searchlight and a beam of light moves exactly vertically upward as seen by the technician. As you observe the beam of light, do you measure the magnitude of the vertical component of its velocity as (a) equal to c , (b) greater than c , or (c) less than c ? (ii) If the technician aims the searchlight directly at you instead of upward, do you measure the magnitude of the horizontal component of its velocity as (a) equal to c , (b) greater than c , or (c) less than c ?

Example 39.6 Relative Velocity of Two Spacecraft

Two spacecraft A and B are moving in opposite directions as shown in Figure 39.14. An observer on the Earth measures the speed of spacecraft A to be $0.750c$ and the speed of spacecraft B to be $0.850c$. Find the velocity of spacecraft B as observed by the crew on spacecraft A.

SOLUTION

Conceptualize There are two observers, one (O) on the Earth and one (O') on spacecraft A. The event is the motion of spacecraft B.

Categorize Because the problem asks to find an observed velocity, we categorize this example as one requiring the Lorentz velocity transformation.

Analyze The Earth-based observer at rest in the S frame makes two measurements, one of each spacecraft. We want to find the velocity of spacecraft B as measured by the crew on spacecraft A. Therefore, $u_x = -0.850c$. The velocity of spacecraft A is also the velocity of the observer at rest in spacecraft A (the S' frame) relative to the observer at rest on the Earth. Therefore, $v = 0.750c$.

Obtain the velocity u'_x of spacecraft B relative to spacecraft A using Equation 39.16:

$$u'_x = \frac{u_x - v}{1 - \frac{u_x v}{c^2}} = \frac{-0.850c - 0.750c}{1 - \frac{(-0.850c)(0.750c)}{c^2}} = -0.977c$$

Finalize The negative sign indicates that spacecraft B is moving in the negative x direction as observed by the crew on spacecraft A. Is that consistent with your expectation from Figure 39.14? Notice that the speed is less than c . That is, an

continued

Pitfall Prevention 39.5

What Can the Observers Agree On? We have seen several measurements that the two observers O and O' do *not* agree on: (1) the time interval between events that take place in the same position in one of their frames, (2) the distance between two points that remain fixed in one of their frames, (3) the velocity components of a moving particle, and (4) whether two events occurring at different locations in both frames are simultaneous or not. The two observers *can* agree on (1) their relative speed of motion v with respect to each other, (2) the speed c of any ray of light, and (3) the simultaneity of two events that take place at the same position *and* time in some frame.

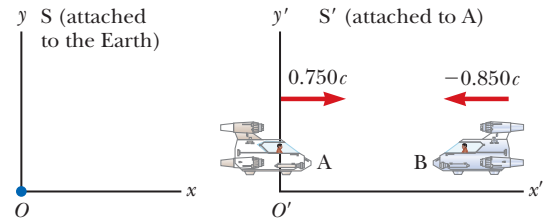


Figure 39.14 (Example 39.6) Two spacecraft A and B move in opposite directions. The speed of spacecraft B relative to spacecraft A is *less* than c and is obtained from the relativistic velocity transformation equation.

39.6 continued

object whose speed is less than c in one frame of reference must have a speed less than c in any other frame. (Had you used the Galilean velocity transformation equation in this example, you would have found that $u'_x = u_x - v = -0.850c - 0.750c = -1.60c$, which is impossible. The Galilean transformation equation does not work in relativistic situations.)

WHAT IF? What if the two spacecraft pass each other? What is their relative speed now?

Answer The calculation using Equation 39.16 involves only the velocities of the two spacecraft and does not depend on their locations. After they pass each other, they have the same velocities, so the velocity of spacecraft B as observed by the crew on spacecraft A is the same, $-0.977c$. The only difference after they pass is that spacecraft B is receding from spacecraft A, whereas it was approaching spacecraft A before it passed.

Example 39.7 Relativistic Leaders of the Pack

Two motorcycle pack leaders named David and Emily are racing at relativistic speeds along perpendicular paths as shown in Figure 39.15. How fast does Emily recede as seen by David over his right shoulder?

SOLUTION

Conceptualize The two observers are David and the police officer in Figure 39.15. The event is the motion of Emily. Figure 39.15 represents the situation as seen by the police officer at rest in frame S. Frame S' moves along with David.

Categorize Because the problem asks to find an observed velocity, we categorize this problem as one requiring the Lorentz velocity transformation. The motion takes place in two dimensions.

Analyze Identify the velocity components for David and Emily according to the police officer:

$$\text{David: } v_x = v = 0.75c \quad v_y = 0$$

$$\text{Emily: } u_x = 0 \quad u_y = -0.90c$$

Using Equations 39.16 and 39.17, calculate u'_x and u'_y for Emily as measured by David:

$$u'_x = \frac{u_x - v}{1 - \frac{u_x v}{c^2}} = \frac{0 - 0.75c}{1 - \frac{(0)(0.75c)}{c^2}} = -0.75c$$

$$u'_y = \frac{u_y}{\gamma \left(1 - \frac{u_x v}{c^2} \right)} = \frac{-0.90c}{\sqrt{1 - \frac{(0.75c)^2}{c^2}} \left(1 - \frac{(0)(0.75c)}{c^2} \right)} = -0.60c$$

Using the Pythagorean theorem, find the speed of Emily as measured by David:

$$u' = \sqrt{(u'_x)^2 + (u'_y)^2} = \sqrt{(-0.75c)^2 + (-0.60c)^2} = 0.96c$$

Finalize This speed is less than c , as required by the special theory of relativity.

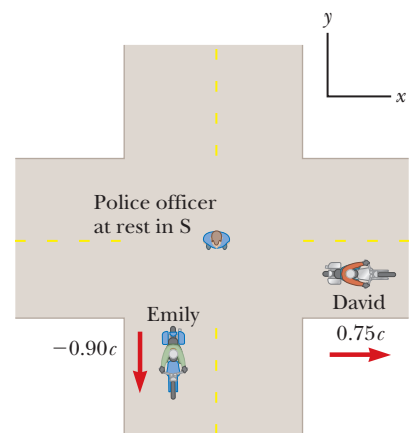


Figure 39.15 (Example 39.7) David moves east with a speed $0.75c$ relative to the police officer, and Emily travels south at a speed $0.90c$ relative to the officer.

39.7 Relativistic Linear Momentum

To describe the motion of particles within the framework of the special theory of relativity properly, you must replace the Galilean transformation equations by the Lorentz transformation equations. Because the laws of physics must remain unchanged under the Lorentz transformation, we must generalize Newton's laws and the definitions of linear momentum and energy to conform to the Lorentz

transformation equations and the principle of relativity. These generalized definitions should reduce to the classical (nonrelativistic) definitions for $v \ll c$.

First, recall from the isolated system model that when two particles (or objects that can be modeled as particles) collide, the total momentum of the isolated system of the two particles remains constant. Suppose we observe this collision in a reference frame S and confirm that the momentum of the system is conserved. Now imagine that the momenta of the particles are measured by an observer in a second reference frame S' moving with velocity \vec{v} relative to the first frame. Using the Lorentz velocity transformation equation and the classical definition of linear momentum, $\vec{p} = m\vec{u}$ (where \vec{u} is the velocity of a particle), we find that linear momentum of the system is *not* measured to be conserved by the observer in S' . Because the laws of physics are the same in all inertial frames, however, linear momentum of the system must be conserved in all frames. We have a contradiction. In view of this contradiction and assuming the Lorentz velocity transformation equation is correct, we must modify the definition of linear momentum so that the momentum of an isolated system is conserved for all observers. For any particle, the correct relativistic equation for linear momentum that satisfies this condition is

$$\vec{p} \equiv \frac{m\vec{u}}{\sqrt{1 - \frac{u^2}{c^2}}} = \gamma m\vec{u} \quad (39.19)$$

where m is the mass of the particle and \vec{u} is the velocity of the particle. When u is much less than c , $\gamma = (1 - u^2/c^2)^{-1/2}$ approaches unity and \vec{p} approaches $m\vec{u}$. Therefore, the relativistic equation for \vec{p} reduces to the classical expression when u is much smaller than c , as it should.

The relativistic force \vec{F} acting on a particle whose linear momentum is \vec{p} is defined as

$$\vec{F} \equiv \frac{d\vec{p}}{dt} \quad (39.20)$$

where \vec{p} is given by Equation 39.19. This expression, which is the relativistic form of Newton's second law, is reasonable because it preserves classical mechanics in the limit of low velocities and is consistent with conservation of linear momentum for an isolated system ($\vec{F}_{\text{ext}} = 0$) both relativistically and classically.

It is left as an end-of-chapter problem (Problem 88) to show that under relativistic conditions, the acceleration \vec{a} of a particle decreases under the action of a constant force, in which case $a \propto (1 - u^2/c^2)^{3/2}$. This proportionality shows that as the particle's speed approaches c , the acceleration caused by any finite force approaches zero. Hence, it is impossible to accelerate a particle from rest to a speed $u \geq c$. This argument reinforces that the speed of light is the ultimate speed, the speed limit of the Universe. It is the maximum possible speed for energy transfer and for information transfer. Any object with mass must move at a lower speed.

Example 39.8 Linear Momentum of an Electron

An electron, which has a mass of 9.11×10^{-31} kg, moves with a speed of $0.750c$. Find the magnitude of its relativistic momentum and compare this value with the momentum calculated from the classical expression.

SOLUTION

Conceptualize Imagine an electron moving with high speed. The electron carries momentum, but the magnitude of its momentum is not given by $p = mu$ because the speed is relativistic.

Categorize We categorize this example as a substitution problem involving a relativistic equation.

Pitfall Prevention 39.6

Watch Out for "Relativistic Mass"

Some older treatments of relativity maintained the conservation of momentum principle at high speeds by using a model in which a particle's mass increases with speed. You might still encounter this notion of "relativistic mass" in your outside reading, especially in older books. Be aware that this notion is no longer widely accepted; today, mass is considered as *invariant*, independent of speed. The mass of an object in all frames is considered to be the mass as measured by an observer at rest with respect to the object.

Definition of relativistic linear momentum

continued

39.8 continued

Use Equation 39.19 with $u = 0.750c$ to find the magnitude of the momentum:

$$p = \frac{m_e u}{\sqrt{1 - \frac{u^2}{c^2}}}$$

$$p = \frac{(9.11 \times 10^{-31} \text{ kg})(0.750)(3.00 \times 10^8 \text{ m/s})}{\sqrt{1 - \frac{(0.750c)^2}{c^2}}}$$

$$= 3.10 \times 10^{-22} \text{ kg} \cdot \text{m/s}$$

The classical expression (used incorrectly here) gives $p_{\text{classical}} = m_e u = 2.05 \times 10^{-22} \text{ kg} \cdot \text{m/s}$. Hence, the correct relativistic result is 50% greater than the classical result!

39.8 Relativistic Energy

We have seen that the definition of linear momentum requires generalization to make it compatible with Einstein's postulates. This conclusion implies that the definition of kinetic energy must most likely be modified also.

To derive the relativistic form of the work–kinetic energy theorem, imagine a particle moving in one dimension along the x axis. A force in the x direction causes the momentum of the particle to change according to Equation 39.20. In what follows, we assume the particle is accelerated from rest to some final speed u . The work done by the force F on the particle is

$$W = \int_{x_1}^{x_2} F dx = \int_{x_1}^{x_2} \frac{dp}{dt} dx \quad (39.21)$$

To perform this integration and find the work done on the particle and the relativistic kinetic energy as a function of u , we first evaluate dp/dt :

$$\frac{dp}{dt} = \frac{d}{dt} \frac{mu}{\sqrt{1 - \frac{u^2}{c^2}}} = \frac{m}{\left(1 - \frac{u^2}{c^2}\right)^{3/2}} \frac{du}{dt}$$

Substituting this expression for dp/dt and $dx = u dt$ into Equation 39.21 gives

$$W = \int_0^t \frac{m}{\left(1 - \frac{u^2}{c^2}\right)^{3/2}} \frac{du}{dt} (u dt) = m \int_0^u \frac{u}{\left(1 - \frac{u^2}{c^2}\right)^{3/2}} du$$

where we use the limits 0 and u in the integral because the integration variable has been changed from t to u . Evaluating the integral gives

$$W = \frac{mc^2}{\sqrt{1 - \frac{u^2}{c^2}}} - mc^2 \quad (39.22)$$

Recall from Chapter 7 that the work done by a force acting on a system consisting of a single particle equals the change in kinetic energy of the particle: $W = \Delta K$. Because we assumed the initial speed of the particle is zero, its initial kinetic energy is zero, so $W = K - K_i = K - 0 = K$. Therefore, the work W in Equation 39.22 is equivalent to the relativistic kinetic energy K :

Relativistic kinetic energy ►

$$K = \frac{mc^2}{\sqrt{1 - \frac{u^2}{c^2}}} - mc^2 = \gamma mc^2 - mc^2 = (\gamma - 1)mc^2 \quad (39.23)$$

This equation is routinely confirmed by experiments using high-energy particle accelerators.

At low speeds, where $u/c \ll 1$, Equation 39.23 should reduce to the classical expression $K = \frac{1}{2}mu^2$. We can check that by using the binomial expansion $(1 - \beta^2)^{-1/2} \approx 1 + \frac{1}{2}\beta^2 + \dots$ for $\beta \ll 1$, where the higher-order powers of β are neglected in the expansion. (In treatments of relativity, β is a common symbol used to represent u/c or v/c .) In our case, $\beta = u/c$, so

$$\gamma = \frac{1}{\sqrt{1 - \frac{u^2}{c^2}}} = \left(1 - \frac{u^2}{c^2}\right)^{-1/2} \approx 1 + \frac{1}{2}\frac{u^2}{c^2}$$

Substituting this result into Equation 39.23 gives

$$K \approx \left[\left(1 + \frac{1}{2}\frac{u^2}{c^2}\right) - 1 \right] mc^2 = \frac{1}{2}mu^2 \quad (\text{for } u/c \ll 1)$$

which is the classical expression for kinetic energy. A graph comparing the relativistic and nonrelativistic expressions is given in Figure 39.16. In the relativistic case, the particle speed never exceeds c , regardless of the kinetic energy. The two curves are in good agreement when $u \ll c$.

The constant term mc^2 in Equation 39.23, which is independent of the speed of the particle, is called the **rest energy** E_R of the particle:

$$E_R = mc^2 \quad (39.24)$$

Equation 39.24 shows that **mass is a form of energy**, where c^2 is simply a constant conversion factor. This expression also shows that a small mass corresponds to an enormous amount of energy, a concept fundamental to nuclear and elementary-particle physics.

The term γmc^2 in Equation 39.23, which depends on the particle speed, is the sum of the kinetic and rest energies. It is called the **total energy** E :

Total energy = kinetic energy + rest energy

$$E = K + mc^2 \quad (39.25)$$

or

$$E = \frac{mc^2}{\sqrt{1 - \frac{u^2}{c^2}}} = \gamma mc^2 \quad (39.26)$$

In many situations, the linear momentum or energy of a particle rather than its speed is measured. It is therefore useful to have an expression relating the total energy E to the relativistic linear momentum p , which is accomplished by using the expressions $E = \gamma mc^2$ and $p = \gamma mu$. By squaring these equations and subtracting, we can eliminate u (Problem 58). The result, after some algebra, is⁶

$$E^2 = p^2c^2 + (mc^2)^2 \quad (39.27)$$

When the particle is at rest, $p = 0$, so $E = E_R = mc^2$.

In Section 35.1, we introduced the concept of a particle of light, called a **photon**. For particles that have zero mass, such as photons, we set $m = 0$ in Equation 39.27 and find that

$$E = pc \quad (39.28)$$

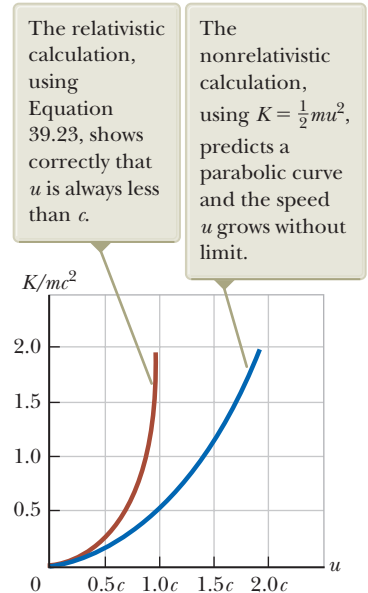


Figure 39.16 A graph comparing relativistic and nonrelativistic kinetic energy of a moving particle. The energies are plotted as a function of particle speed u .

◀ Total energy of a relativistic particle

◀ Energy-momentum relationship for a relativistic particle

⁶One way to remember this relationship is to draw a right triangle having a hypotenuse of length E and legs of lengths pc and mc^2 .

This equation is an exact expression relating total energy and linear momentum for photons, which always travel at the speed of light (in vacuum).

Finally, because the mass m of a particle is independent of its motion, m must have the same value in all reference frames. For this reason, m is often called the **invariant mass**. On the other hand, because the total energy and linear momentum of a particle both depend on velocity, these quantities depend on the reference frame in which they are measured.

When dealing with subatomic particles, it is convenient to express their energy in electron volts (Section 25.1) because the particles are usually given this energy by acceleration through a potential difference. The conversion factor, as you recall from Equation 25.5, is

$$1 \text{ eV} = 1.602 \times 10^{-19} \text{ J}$$

For example, the mass of an electron is $9.109 \times 10^{-31} \text{ kg}$. Hence, the rest energy of the electron is

$$\begin{aligned} m_e c^2 &= (9.109 \times 10^{-31} \text{ kg})(2.998 \times 10^8 \text{ m/s})^2 = 8.187 \times 10^{-14} \text{ J} \\ &= (8.187 \times 10^{-14} \text{ J})(1 \text{ eV}/1.602 \times 10^{-19} \text{ J}) = 0.511 \text{ MeV} \end{aligned}$$

- Quick Quiz 39.9** The following *pairs* of energies—particle 1: E , $2E$; particle 2: E , $3E$; particle 3: $2E$, $4E$ —represent the rest energy and total energy of three different particles. Rank the particles from greatest to least according to their
- (a) mass, (b) kinetic energy, and (c) speed.

Example 39.9 The Energy of a Speedy Proton

(A) Find the rest energy of a proton in units of electron volts.

SOLUTION

Conceptualize Even if the proton is not moving, it has energy associated with its mass. If it moves, the proton possesses more energy, with the total energy being the sum of its rest energy and its kinetic energy.

Categorize The phrase “rest energy” suggests we must take a relativistic rather than a classical approach to this problem.

Analyze Use Equation 39.24 to find the rest energy:

$$\begin{aligned} E_R &= m_p c^2 = (1.6726 \times 10^{-27} \text{ kg})(2.998 \times 10^8 \text{ m/s})^2 \\ &= (1.504 \times 10^{-10} \text{ J}) \left(\frac{1.00 \text{ eV}}{1.602 \times 10^{-19} \text{ J}} \right) = 938 \text{ MeV} \end{aligned}$$

(B) If the total energy of a proton is three times its rest energy, what is the speed of the proton?

SOLUTION

Use Equation 39.26 to relate the total energy of the proton to the rest energy:

$$E = 3m_p c^2 = \frac{m_p c^2}{\sqrt{1 - \frac{u^2}{c^2}}} \rightarrow 3 = \frac{1}{\sqrt{1 - \frac{u^2}{c^2}}}$$

Solve for u :

$$1 - \frac{u^2}{c^2} = \frac{1}{9} \rightarrow \frac{u^2}{c^2} = \frac{8}{9}$$

$$u = \frac{\sqrt{8}}{3} c = 0.943c = 2.83 \times 10^8 \text{ m/s}$$

(C) Determine the kinetic energy of the proton in units of electron volts.

▶ 39.9 continued

SOLUTION

Use Equation 39.25 to find the kinetic energy of the proton:

$$\begin{aligned} K &= E - m_p c^2 = 3m_p c^2 - m_p c^2 = 2m_p c^2 \\ &= 2(938 \text{ MeV}) = 1.88 \times 10^3 \text{ MeV} \end{aligned}$$

(D) What is the proton's momentum?

SOLUTION

Use Equation 39.27 to calculate the momentum:

$$\begin{aligned} E^2 &= p^2 c^2 + (m_p c^2)^2 = (3m_p c^2)^2 \\ p^2 c^2 &= 9(m_p c^2)^2 - (m_p c^2)^2 = 8(m_p c^2)^2 \\ p &= \sqrt{8} \frac{m_p c^2}{c} = \sqrt{8} \frac{938 \text{ MeV}}{c} = 2.65 \times 10^3 \text{ MeV}/c \end{aligned}$$

Finalize The unit of momentum in part (D) is written MeV/c, which is a common unit in particle physics. For comparison, you might want to solve this example using classical equations.

WHAT IF? In classical physics, if the momentum of a particle doubles, the kinetic energy increases by a factor of 4. What happens to the kinetic energy of the proton in this example if its momentum doubles?

Answer Based on what we have seen so far in relativity, it is likely you would predict that its kinetic energy does not increase by a factor of 4.

Find the new doubled momentum:

$$p_{\text{new}} = 2 \left(\sqrt{8} \frac{m_p c^2}{c} \right) = 4\sqrt{2} \frac{m_p c^2}{c}$$

Use this result in Equation 39.27 to find the new total energy:

$$\begin{aligned} E_{\text{new}}^2 &= p_{\text{new}}^2 c^2 + (m_p c^2)^2 \\ E_{\text{new}}^2 &= \left(4\sqrt{2} \frac{m_p c^2}{c} \right)^2 c^2 + (m_p c^2)^2 = 33(m_p c^2)^2 \\ E_{\text{new}} &= \sqrt{33} m_p c^2 = 5.7 m_p c^2 \end{aligned}$$

Use Equation 39.25 to find the new kinetic energy:

$$K_{\text{new}} = E_{\text{new}} - m_p c^2 = 5.7 m_p c^2 - m_p c^2 = 4.7 m_p c^2$$

This value is a little more than twice the kinetic energy found in part (C), not four times. In general, the factor by which the kinetic energy increases if the momentum doubles depends on the initial momentum, but it approaches 4 as the momentum approaches zero. In this latter situation, classical physics correctly describes the situation.

Equation 39.26, $E = \gamma m c^2$, represents the total energy of a particle. This important equation suggests that even when a particle is at rest ($\gamma = 1$), it still possesses enormous energy through its mass. The clearest experimental proof of the equivalence of mass and energy occurs in nuclear and elementary-particle interactions in which the conversion of mass into kinetic energy takes place. Consequently, we cannot use the principle of conservation of energy in relativistic situations as it was outlined in Chapter 8. We must modify the principle by including rest energy as another form of energy storage.

This concept is important in atomic and nuclear processes, in which the change in mass is a relatively large fraction of the initial mass. In a conventional nuclear reactor, for example, the uranium nucleus undergoes *fission*, a reaction that results in several lighter fragments having considerable kinetic energy. In the case of ^{235}U , which is used as fuel in nuclear power plants, the fragments are two lighter nuclei and a few neutrons. The total mass of the fragments is less than that of the ^{235}U by an amount Δm . The corresponding energy $\Delta m c^2$ associated with this mass difference is

exactly equal to the sum of the kinetic energies of the fragments. The kinetic energy is absorbed as the fragments move through water, raising the internal energy of the water. This internal energy is used to produce steam for the generation of electricity.

Next, consider a basic *fusion* reaction in which two deuterium atoms combine to form one helium atom. The decrease in mass that results from the creation of one helium atom from two deuterium atoms is $\Delta m = 4.25 \times 10^{-29}$ kg. Hence, the corresponding energy that results from one fusion reaction is $\Delta mc^2 = 3.83 \times 10^{-12}$ J = 23.9 MeV. To appreciate the magnitude of this result, consider that if only 1 g of deuterium were converted to helium, the energy released would be on the order of 10^{12} J! In 2013's cost of electrical energy, this energy would be worth approximately \$35 000. We shall present more details of these nuclear processes in Chapter 45 of the extended version of this textbook.

Example 39.10 Mass Change in a Radioactive Decay

The ^{216}Po nucleus is unstable and exhibits radioactivity (Chapter 44). It decays to ^{212}Pb by emitting an alpha particle, which is a helium nucleus, ^4He . The relevant masses, in atomic mass units (see Table A.1 in Appendix A), are $m_i = m(^{216}\text{Po}) = 216.001\,915$ u and $m_f = m(^{212}\text{Pb}) + m(^4\text{He}) = 211.991\,898$ u + 4.002\,603 u.

(A) Find the mass change of the system in this decay.

SOLUTION

Conceptualize The initial system is the ^{216}Po nucleus. Imagine the mass of the system decreasing during the decay and transforming to kinetic energy of the alpha particle and the ^{212}Pb nucleus after the decay.

Categorize We use concepts discussed in this section, so we categorize this example as a substitution problem.

Calculate the change in mass using the mass values given in the problem statement.

$$\begin{aligned}\Delta m &= 216.001\,915 \text{ u} - (211.991\,898 \text{ u} + 4.002\,603 \text{ u}) \\ &= 0.007\,414 \text{ u} = 1.23 \times 10^{-29} \text{ kg}\end{aligned}$$

(B) Find the energy this mass change represents.

SOLUTION

Use Equation 39.24 to find the energy associated with this mass change:

$$\begin{aligned}E &= \Delta mc^2 = (1.23 \times 10^{-29} \text{ kg})(3.00 \times 10^8 \text{ m/s})^2 \\ &= 1.11 \times 10^{-12} \text{ J} = 6.92 \text{ MeV}\end{aligned}$$

39.9 The General Theory of Relativity

Up to this point, we have sidestepped a curious puzzle. Mass has two seemingly different properties: a *gravitational attraction* for other masses and an *inertial* property that represents a resistance to acceleration. We first discussed these two attributes for mass in Section 5.5. To designate these two attributes, we use the subscripts g and i and write

$$\text{Gravitational property: } F_g = m_g g$$

$$\text{Inertial property: } \sum F = m_i a$$

The value for the gravitational constant G was chosen to make the magnitudes of m_g and m_i numerically equal. Regardless of how G is chosen, however, the strict proportionality of m_g and m_i has been established experimentally to an extremely high degree: a few parts in 10^{12} . Therefore, it appears that gravitational mass and inertial mass may indeed be exactly proportional.

Why, though? They seem to involve two entirely different concepts: a force of mutual gravitational attraction between two masses and the resistance of a single mass to being accelerated. This question, which puzzled Newton and many other physicists over the years, was answered by Einstein in 1916 when he published his theory of gravitation, known as the *general theory of relativity*. Because it is a mathematically complex theory, we offer merely a hint of its elegance and insight.

In Einstein's view, the dual behavior of mass was evidence for a very intimate and basic connection between the two behaviors. He pointed out that no mechanical experiment (such as dropping an object) could distinguish between the two situations illustrated in Figures 39.17a and 39.17b. In Figure 39.17a, a person standing in an elevator on the surface of a planet feels pressed into the floor due to the gravitational force. If he releases his briefcase, he observes it moving toward the floor with acceleration $\vec{g} = -g\hat{j}$. In Figure 39.17b, the person is in an elevator in empty space accelerating upward with $\vec{a}_{\text{el}} = +g\hat{j}$. The person feels pressed into the floor with the same force as in Figure 39.17a. If he releases his briefcase, he observes it moving toward the floor with acceleration g , exactly as in the previous situation. In each situation, an object released by the observer undergoes a downward acceleration of magnitude g relative to the floor. In Figure 39.17a, the person is at rest in an inertial frame in a gravitational field due to the planet. In Figure 39.17b, the person is in a noninertial frame accelerating in gravity-free space. Einstein's claim is that these two situations are completely equivalent.

Einstein carried this idea further and proposed that *no* experiment, mechanical or otherwise, could distinguish between the two situations. This extension to include all phenomena (not just mechanical ones) has interesting consequences. For example, suppose a light pulse is sent horizontally across the elevator as in Figure 39.17c, in which the elevator is accelerating upward in empty space. From the point of view of an observer in an inertial frame outside the elevator, the light travels in a straight line while the floor of the elevator accelerates upward. According to the observer on the elevator, however, the trajectory of the light pulse bends downward as the floor of the elevator (and the observer) accelerates upward. Therefore, based on the equality of parts (a) and (b) of the figure, Einstein proposed that a

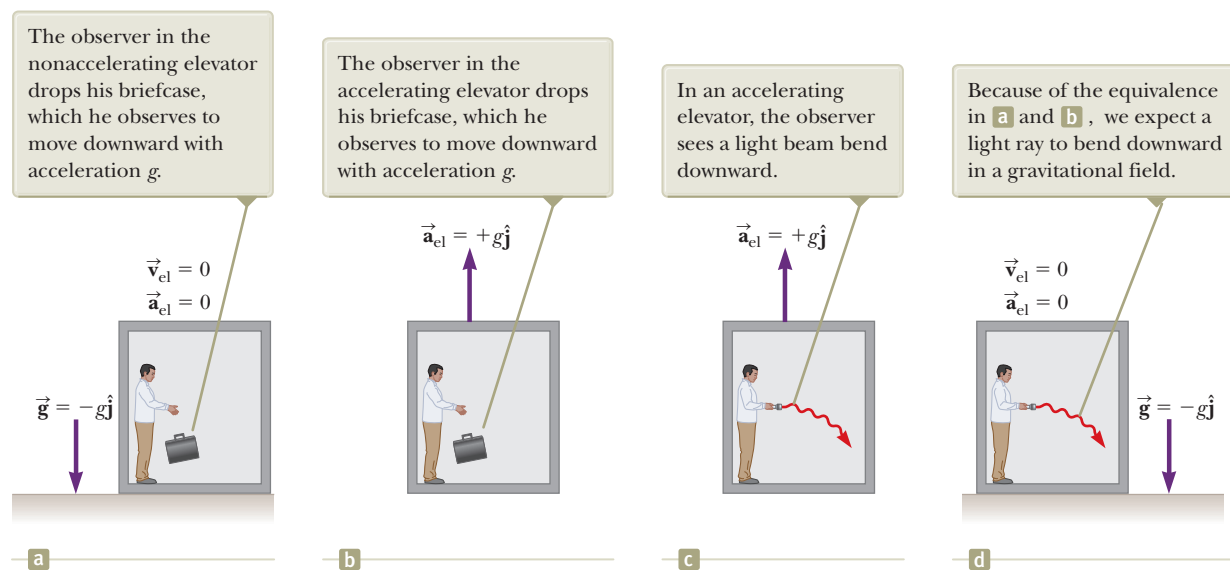


Figure 39.17 (a) The observer is at rest in an elevator in a uniform gravitational field $\vec{g} = -g\hat{j}$, directed downward. (b) The observer is in a region where gravity is negligible, but the elevator moves upward with an acceleration $\vec{a}_{\text{el}} = +g\hat{j}$. According to Einstein, the frames of reference in (a) and (b) are equivalent in every way. No local experiment can distinguish any difference between the two frames. (c) An observer watches a beam of light in an accelerating elevator. (d) Einstein's prediction of the behavior of a beam of light in a gravitational field.

beam of light should also be bent downward by a gravitational field as in Figure 39.17d. Experiments have verified the effect, although the bending is small. A laser aimed at the horizon falls less than 1 cm after traveling 6 000 km. (No such bending is predicted in Newton's theory of gravitation.)

Einstein's **general theory of relativity** has two postulates:


- All the laws of nature have the same form for observers in any frame of reference, whether accelerated or not.
- In the vicinity of any point, a gravitational field is equivalent to an accelerated frame of reference in gravity-free space (the **principle of equivalence**).

One interesting effect predicted by the general theory is that time is altered by gravity. A clock in the presence of gravity runs slower than one located where gravity is negligible. Consequently, the frequencies of radiation emitted by atoms in the presence of a strong gravitational field are *redshifted* to lower frequencies when compared with the same emissions in the presence of a weak field. This gravitational redshift has been detected in spectral lines emitted by atoms in massive stars. It has also been verified on the Earth by comparing the frequencies of gamma rays emitted from nuclei separated vertically by about 20 m.

The second postulate suggests a gravitational field may be “transformed away” at any point if we choose an appropriate accelerated frame of reference, a freely falling one. Einstein developed an ingenious method of describing the acceleration necessary to make the gravitational field “disappear.” He specified a concept, the *curvature of space–time*, that describes the gravitational effect at every point. In fact, the curvature of space–time completely replaces Newton's gravitational theory. According to Einstein, there is no such thing as a gravitational force. Rather, the presence of a mass causes a curvature of space–time in the vicinity of the mass, and this curvature dictates the space–time path that all freely moving objects must follow.

As an example of the effects of curved space–time, imagine two travelers moving on parallel paths a few meters apart on the surface of the Earth and maintaining an exact northward heading along two longitude lines. As they observe each other near the equator, they will claim that their paths are exactly parallel. As they approach the North Pole, however, they notice that they are moving closer together and will meet at the North Pole. Therefore, they claim that they moved along parallel paths, but moved toward each other, *as if there were an attractive force between them*. The travelers make this conclusion based on their everyday experience of moving on flat surfaces. From our mental representation, however, we realize they are walking on a curved surface, and it is the geometry of the curved surface, rather than an attractive force, that causes them to converge. In a similar way, general relativity replaces the notion of forces with the movement of objects through curved space–time.

One prediction of the general theory of relativity is that a light ray passing near the Sun should be deflected in the curved space–time created by the Sun's mass. This prediction was confirmed when astronomers detected the bending of starlight near the Sun during a total solar eclipse that occurred shortly after World War I (Fig. 39.18). When this discovery was announced, Einstein became an international celebrity.



Courtesy of NASA

Einstein's cross. The four outer bright spots are images of the same galaxy that have been bent around a massive object located between the galaxy and the Earth. The massive object acts like a lens, causing the rays of light that were diverging from the distant galaxy to converge on the Earth. (If the intervening massive object had a uniform mass distribution, we would see a bright ring instead of four spots.)

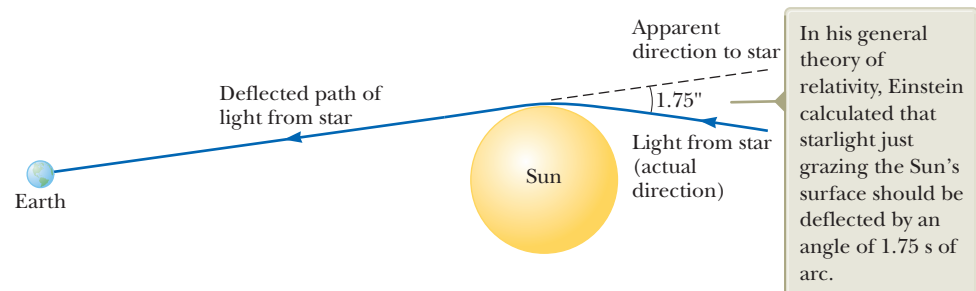


Figure 39.18 Deflection of starlight passing near the Sun. Because of this effect, the Sun or some other remote object can act as a *gravitational lens*.

If the concentration of mass becomes very great as is believed to occur when a large star exhausts its nuclear fuel and collapses to a very small volume, a **black hole** may form as discussed in Chapter 13. Here, the curvature of space–time is so extreme that within a certain distance from the center of the black hole all matter and light become trapped as discussed in Section 13.6.

Summary

Definitions

The relativistic expression for the **linear momentum** of a particle moving with a velocity \vec{u} is

$$\vec{p} \equiv \frac{m\vec{u}}{\sqrt{1 - \frac{u^2}{c^2}}} = \gamma m\vec{u} \quad (39.19)$$

The relativistic force \vec{F} acting on a particle whose linear momentum is \vec{p} is defined as

$$\vec{F} \equiv \frac{d\vec{p}}{dt} \quad (39.20)$$

Concepts and Principles

The two basic postulates of the special theory of relativity are as follows:

- The laws of physics must be the same in all inertial reference frames.
- The speed of light in vacuum has the same value, $c = 3.00 \times 10^8$ m/s, in all inertial frames, regardless of the velocity of the observer or the velocity of the source emitting the light.

Three consequences of the special theory of relativity are as follows:

- Events that are measured to be simultaneous for one observer are not necessarily measured to be simultaneous for another observer who is in motion relative to the first.
- Clocks in motion relative to an observer are measured to run slower by a factor $\gamma = (1 - v^2/c^2)^{-1/2}$. This phenomenon is known as **time dilation**.
- The lengths of objects in motion are measured to be shorter in the direction of motion by a factor $1/\gamma = (1 - v^2/c^2)^{1/2}$. This phenomenon is known as **length contraction**.

To satisfy the postulates of special relativity, the Galilean transformation equations must be replaced by the **Lorentz transformation equations**:

$$x' = \gamma(x - vt) \quad y' = y \quad z' = z \quad t' = \gamma\left(t - \frac{v}{c^2}x\right) \quad (39.11)$$

where $\gamma = (1 - v^2/c^2)^{-1/2}$ and the S' frame moves in the x direction at speed v relative to the S frame.

The relativistic form of the **Lorentz velocity transformation equation** is

$$u'_x = \frac{u_x - v}{1 - \frac{u_x v}{c^2}} \quad (39.16)$$

where u'_x is the x component of the velocity of an object as measured in the S' frame and u_x is its component as measured in the S frame.

The relativistic expression for the **kinetic energy** of a particle is

$$K = \frac{mc^2}{\sqrt{1 - \frac{u^2}{c^2}}} - mc^2 = (\gamma - 1)mc^2 \quad (39.23)$$

The constant term mc^2 in Equation 39.23 is called the **rest energy** E_R of the particle:

$$E_R = mc^2 \quad (39.24)$$

The **total energy** E of a particle is given by

$$E = \frac{mc^2}{\sqrt{1 - \frac{u^2}{c^2}}} = \gamma mc^2 \quad (39.26)$$

The relativistic linear momentum of a particle is related to its total energy through the equation

$$E^2 = p^2 c^2 + (mc^2)^2 \quad (39.27)$$

Objective Questions

1. denotes answer available in *Student Solutions Manual/Study Guide*

- (i) Does the speed of an electron have an upper limit? (a) yes, the speed of light c (b) yes, with another value (c) no (ii) Does the magnitude of an electron's momentum have an upper limit? (a) yes, $m_e c$ (b) yes, with another value (c) no (iii) Does the electron's kinetic energy have an upper limit? (a) yes, $m_e c^2$ (b) yes, $\frac{1}{2}m_e c^2$ (c) yes, with another value (d) no
- A spacecraft zooms past the Earth with a constant velocity. An observer on the Earth measures that an undamaged clock on the spacecraft is ticking at one-third the rate of an identical clock on the Earth. What does an observer on the spacecraft measure about the Earth-based clock's ticking rate? (a) It runs more than three times faster than his own clock. (b) It runs three times faster than his own. (c) It runs at the same rate as his own. (d) It runs at one-third the rate of his own. (e) It runs at less than one-third the rate of his own.
- As a car heads down a highway traveling at a speed v away from a ground observer, which of the following statements are true about the measured speed of the light beam from the car's headlights? More than one statement may be correct. (a) The ground observer measures the light speed to be $c + v$. (b) The driver measures the light speed to be c . (c) The ground observer measures the light speed to be c . (d) The driver measures the light speed to be $c - v$. (e) The ground observer measures the light speed to be $c - v$.
- A spacecraft built in the shape of a sphere moves past an observer on the Earth with a speed of $0.500c$. What shape does the observer measure for the spacecraft as it goes by? (a) a sphere (b) a cigar shape, elongated along the direction of motion (c) a round pillow shape, flattened along the direction of motion (d) a conical shape, pointing in the direction of motion
- An astronaut is traveling in a spacecraft in outer space in a straight line at a constant speed of $0.500c$. Which of the following effects would she experience? (a) She would feel heavier. (b) She would find it harder to breathe. (c) Her heart rate would change. (d) Some of the dimensions of her spacecraft would be shorter. (e) None of those answers is correct.
- You measure the volume of a cube at rest to be V_0 . You then measure the volume of the same cube as it passes you in a direction parallel to one side of the cube. The speed of the cube is $0.980c$, so $\gamma \approx 5$. Is the volume you measure close to (a) $V_0/25$, (b) $V_0/5$, (c) V_0 , (d) $5V_0$, or (e) $25V_0$?
- Two identical clocks are set side by side and synchronized. One remains on the Earth. The other is put into orbit around the Earth moving rapidly toward the east. (i) As measured by an observer on the Earth, does the orbiting clock (a) run faster than the Earth-based clock, (b) run at the same rate, or (c) run slower? (ii) The orbiting clock is returned to its original location and brought to rest relative to the Earth-based clock. Thereafter, what happens? (a) Its reading lags farther and farther behind the Earth-based clock. (b) It lags behind the Earth-based clock by a constant amount. (c) It is synchronous with the Earth-based clock. (d) It is ahead of the Earth-based clock by a constant amount. (e) It gets farther and farther ahead of the Earth-based clock.
- The following three particles all have the same total energy E : (a) a photon, (b) a proton, and (c) an electron. Rank the magnitudes of the particles' momenta from greatest to smallest.
- Which of the following statements are fundamental postulates of the special theory of relativity? More than one statement may be correct. (a) Light moves through a substance called the ether. (b) The speed of light depends on the inertial reference frame in which it is measured. (c) The laws of physics depend on the inertial reference frame in which they are used. (d) The laws of physics are the same in all inertial reference frames. (e) The speed of light is independent of the inertial reference frame in which it is measured.
- A distant astronomical object (a quasar) is moving away from us at half the speed of light. What is the speed of the light we receive from this quasar? (a) greater than c (b) c (c) between $c/2$ and c (d) $c/2$ (e) between 0 and $c/2$

Conceptual Questions

1. denotes answer available in *Student Solutions Manual/Study Guide*

- In several cases, a nearby star has been found to have a large planet orbiting about it, although light from the planet could not be seen separately from the starlight. Using the ideas of a system rotating about its center of mass and of the Doppler shift for light, explain how an astronomer could determine the presence of the invisible planet.
- Explain why, when defining the length of a rod, it is necessary to specify that the positions of the ends of the rod are to be measured simultaneously.
- A train is approaching you at very high speed as you stand next to the tracks. Just as an observer on the train passes you, you both begin to play the same recorded version of a Beethoven symphony on identical iPods. (a) According to you, whose iPod finishes the symphony first? (b) **What If?** According to the observer on the train, whose iPod finishes the symphony first? (c) Whose iPod actually finishes the symphony first?
- List three ways our day-to-day lives would change if the speed of light were only 50 m/s.
- How is acceleration indicated on a space-time graph?
- (a) "Newtonian mechanics correctly describes objects moving at ordinary speeds, and relativistic mechanics correctly describes objects moving very fast." (b) "Relativistic mechanics must make a smooth transition as

it reduces to Newtonian mechanics in a case in which the speed of an object becomes small compared with the speed of light.” Argue for or against statements (a) and (b).

7. The speed of light in water is 230 Mm/s. Suppose an electron is moving through water at 250 Mm/s. Does that violate the principle of relativity? Explain.
8. A particle is moving at a speed less than $c/2$. If the speed of the particle is doubled, what happens to its momentum?
9. Give a physical argument that shows it is impossible to accelerate an object of mass m to the speed of light, even with a continuous force acting on it.
10. Explain how the Doppler effect with microwaves is used to determine the speed of an automobile.
11. It is said that Einstein, in his teenage years, asked the question, “What would I see in a mirror if I carried it in my hands and ran at a speed near that of light?” How would you answer this question?
12. (i) An object is placed at a position $p > f$ from a concave mirror as shown in Figure CQ39.12a, where f is the focal length of the mirror. In a finite time interval, the object is moved to the right to a position at the focal point F of the mirror. Show that the image of the object moves at a speed greater than the speed of

light. (ii) A laser pointer is suspended in a horizontal plane and set into rapid rotation as shown in Figure CQ39.12b. Show that the spot of light it produces on a distant screen can move across the screen at a speed greater than the speed of light. (If you carry out this experiment, make sure the direct laser light cannot enter a person’s eyes.) (iii) Argue that the experiments in parts (i) and (ii) do not invalidate the principle that no material, no energy, and no information can move faster than light moves in a vacuum.

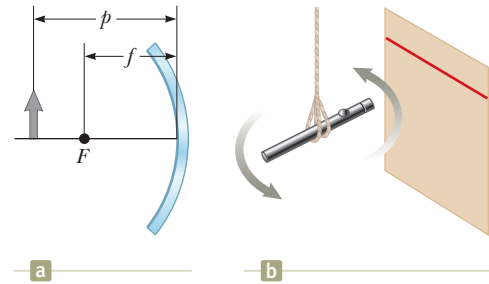


Figure CQ39.12

13. With regard to reference frames, how does general relativity differ from special relativity?
14. Two identical clocks are in the same house, one upstairs in a bedroom and the other downstairs in the kitchen. Which clock runs slower? Explain.

Problems

WebAssign The problems found in this chapter may be assigned online in Enhanced WebAssign

1. straightforward; 2. intermediate; 3. challenging

1. full solution available in the *Student Solutions Manual/Study Guide*

AMT Analysis Model tutorial available in Enhanced WebAssign

GP Guided Problem

M Master It tutorial available in Enhanced WebAssign

W Watch It video solution available in Enhanced WebAssign

Section 39.1 The Principle of Galilean Relativity

Problems 46–48, 50, 51, 53–54, and 79 in Chapter 4 can be assigned with this section.

1. The truck in Figure P39.1 is moving at a speed of 10.0 m/s relative to the ground. The person on the truck throws a baseball in the backward direction at a speed of 20.0 m/s relative to the truck. What is the velocity of the baseball as measured by the observer on the ground?

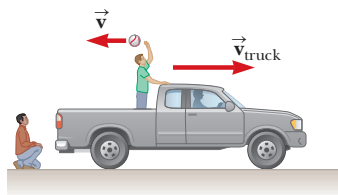


Figure P39.1

2. In a laboratory frame of reference, an observer notes that Newton’s second law is valid. Assume forces and masses are measured to be the same in any reference frame for speeds small compared with the speed of light. (a) Show that Newton’s second law is also valid for an observer moving at a constant speed, small compared with the speed of light, relative to the laboratory frame. (b) Show that Newton’s second law is *not* valid in a reference frame moving past the laboratory frame with a constant acceleration.

3. The speed of the Earth in its orbit is 29.8 km/s. If that is the magnitude of the velocity \vec{v} of the ether wind in Figure P39.3, find the angle ϕ between the velocity of light \vec{c} in vacuum and the resultant velocity of light if there were an ether.

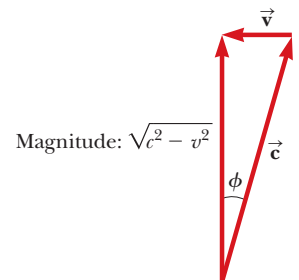


Figure P39.3

- 4.** A car of mass 2 000 kg moving with a speed of 20.0 m/s collides and locks together with a 1 500-kg car at rest at a stop sign. Show that momentum is conserved in a reference frame moving at 10.0 m/s in the direction of the moving car.

Section 39.2 The Michelson–Morley Experiment

Section 39.3 Einstein's Principle of Relativity

Section 39.4 Consequences of the Special Theory of Relativity

Problem 82 in Chapter 4 can be assigned with this section.

- 5.** A star is 5.00 ly from the Earth. At what speed must a spacecraft travel on its journey to the star such that the Earth–star distance measured in the frame of the spacecraft is 2.00 ly?
- 6.** A meterstick moving at $0.900c$ relative to the Earth's surface approaches an observer at rest with respect to the Earth's surface. (a) What is the meterstick's length as measured by the observer? (b) Qualitatively, how would the answer to part (a) change if the observer started running toward the meterstick?
- 7.** At what speed does a clock move if it is measured to run at a rate one-half the rate of a clock at rest with respect to an observer?
- 8.** A muon formed high in the Earth's atmosphere is measured by an observer on the Earth's surface to travel at speed $v = 0.990c$ for a distance of 4.60 km before it decays into an electron, a neutrino, and an antineutrino ($\mu^- \rightarrow e^- + \nu + \bar{\nu}$). (a) For what time interval does the muon live as measured in its reference frame? (b) How far does the Earth travel as measured in the frame of the muon?
- 9.** How fast must a meterstick be moving if its length is measured to shrink to 0.500 m?
- 10.** An astronaut is traveling in a space vehicle moving at $0.500c$ relative to the Earth. The astronaut measures her pulse rate at 75.0 beats per minute. Signals generated by the astronaut's pulse are radioed to the Earth when the vehicle is moving in a direction perpendicular to the line that connects the vehicle with an observer on the Earth. (a) What pulse rate does the Earth-based observer measure? (b) **What If?** What would be the pulse rate if the speed of the space vehicle were increased to $0.990c$?
- 11.** A physicist drives through a stop light. When he is pulled over, he tells the police officer that the Doppler shift made the red light of wavelength 650 nm appear green to him, with a wavelength of 520 nm. The police officer writes out a traffic citation for speeding. How fast was the physicist traveling, according to his own testimony?
- 12.** A fellow astronaut passes by you in a spacecraft traveling at a high speed. The astronaut tells you that his craft is 20.0 m long and that the identical craft you are sitting in is 19.0 m long. According to your observations, (a) how long is your craft, (b) how long is the astronaut's craft, and (c) what is the speed of the astronaut's craft relative to your craft?
- 13.** A deep-space vehicle moves away from the Earth with a speed of $0.800c$. An astronaut on the vehicle measures a time interval of 3.00 s to rotate her body through 1.00 rev as she floats in the vehicle. What time interval is required for this rotation according to an observer on the Earth?
- 14.** For what value of v does $\gamma = 1.010$? Observe that for speeds lower than this value, time dilation and length contraction are effects amounting to less than 1%.
- 15.** A supertrain with a proper length of 100 m travels at a speed of $0.950c$ as it passes through a tunnel having a proper length of 50.0 m. As seen by a trackside observer, is the train ever completely within the tunnel? If so, by how much do the train's ends clear the ends of the tunnel?
- 16.** The average lifetime of a pi meson in its own frame of reference (i.e., the proper lifetime) is 2.6×10^{-8} s. If the meson moves with a speed of $0.98c$, what is (a) its mean lifetime as measured by an observer on Earth, and (b) the average distance it travels before decaying, as measured by an observer on Earth? (c) What distance would it travel if time dilation did not occur?
- 17.** An astronomer on the Earth observes a meteoroid in the southern sky approaching the Earth at a speed of $0.800c$. At the time of its discovery the meteoroid is 20.0 ly from the Earth. Calculate (a) the time interval required for the meteoroid to reach the Earth as measured by the Earthbound astronomer, (b) this time interval as measured by a tourist on the meteoroid, and (c) the distance to the Earth as measured by the tourist.
- 18.** A cube of steel has a volume of 1.00 cm^3 and a mass of 8.00 g when at rest on the Earth. If this cube is now given a speed $u = 0.900c$, what is its density as measured by a stationary observer? Note that relativistic density is defined as E_R/c^2V .
- 19.** A spacecraft with a proper length of 300 m passes by an observer on the Earth. According to this observer, it takes $0.750 \mu\text{s}$ for the spacecraft to pass a fixed point. Determine the speed of the spacecraft as measured by the Earth-based observer.
- 20.** A spacecraft with a proper length of L_p passes by an observer on the Earth. According to this observer, it takes a time interval Δt for the spacecraft to pass a fixed point. Determine the speed of the object as measured by the Earth-based observer.
- 21.** A light source recedes from an observer with a speed v_s that is small compared with c . (a) Show that the fractional shift in the measured wavelength is given by the approximate expression
- $$\frac{\Delta\lambda}{\lambda} \approx \frac{v_s}{c}$$
- This phenomenon is known as the *redshift* because the visible light is shifted toward the red. (b) Spectroscopic measurements of light at $\lambda = 397 \text{ nm}$ coming from a galaxy in Ursa Major reveal a redshift of 20.0 nm. What is the recessional speed of the galaxy?

22. **Review.** In 1963, astronaut Gordon Cooper orbited the Earth 22 times. The press stated that for each orbit, he aged two-millionths of a second less than he would have had he remained on the Earth. (a) Assuming Cooper was 160 km above the Earth in a circular orbit, determine the difference in elapsed time between someone on the Earth and the orbiting astronaut for the 22 orbits. You may use the approximation

$$\frac{1}{\sqrt{1-x}} \approx 1 + \frac{x}{2}$$

for small x . (b) Did the press report accurate information? Explain.

23. Police radar detects the speed of a car (Fig. P39.23) as follows. Microwaves of a precisely known frequency are broadcast toward the car. The moving car reflects the microwaves with a Doppler shift. The reflected waves are received and combined with an attenuated version of the transmitted wave. Beats occur between the two microwave signals. The beat frequency is measured. (a) For an electromagnetic wave reflected back to its source from a mirror approaching at speed v , show that the reflected wave has frequency

$$f' = \frac{c+v}{c-v} f$$

where f is the source frequency. (b) Noting that v is much less than c , show that the beat frequency can be written as $f_{\text{beat}} = 2v/\lambda$. (c) What beat frequency is measured for a car speed of 30.0 m/s if the microwaves have frequency 10.0 GHz? (d) If the beat frequency measurement in part (c) is accurate to ± 5.0 Hz, how accurate is the speed measurement?



Figure P39.23

24. The identical twins Speedo and Goslo join a migration from the Earth to Planet X, 20.0 ly away in a reference frame in which both planets are at rest. The twins, of the same age, depart at the same moment on different spacecraft. Speedo's spacecraft travels steadily at $0.950c$ and Goslo's at $0.750c$. (a) Calculate the age difference between the twins after Goslo's spacecraft lands on Planet X. (b) Which twin is older?
25. An atomic clock moves at 1 000 km/h for 1.00 h as measured by an identical clock on the Earth. At the

end of the 1.00-h interval, how many nanoseconds slow will the moving clock be compared with the Earth-based clock?

26. **Review.** An alien civilization occupies a planet circling a brown dwarf, several light-years away. The plane of the planet's orbit is perpendicular to a line from the brown dwarf to the Sun, so the planet is at nearly a fixed position relative to the Sun. The extraterrestrials have come to love broadcasts of *MacGyver*, on television channel 2, at carrier frequency 57.0 MHz. Their line of sight to us is in the plane of the Earth's orbit. Find the difference between the highest and lowest frequencies they receive due to the Earth's orbital motion around the Sun.

Section 39.5 The Lorentz Transformation Equations

27. A red light flashes at position $x_R = 3.00$ m and time $t_R = 1.00 \times 10^{-9}$ s, and a blue light flashes at $x_B = 5.00$ m and $t_B = 9.00 \times 10^{-9}$ s, all measured in the S reference frame. Reference frame S' moves uniformly to the right and has its origin at the same point as S at $t = t' = 0$. Both flashes are observed to occur at the same place in S'. (a) Find the relative speed between S and S'. (b) Find the location of the two flashes in frame S'. (c) At what time does the red flash occur in the S' frame?

28. Shannon observes two light pulses to be emitted from the same location, but separated in time by $3.00 \mu\text{s}$. Kimmie observes the emission of the same two pulses to be separated in time by $9.00 \mu\text{s}$. (a) How fast is Kimmie moving relative to Shannon? (b) According to Kimmie, what is the separation in space of the two pulses?

29. A moving rod is observed to have a length of $\ell = 2.00$ m and to be oriented at an angle of $\theta = 30.0^\circ$ with respect to the direction of motion as shown in Figure P39.29. The rod has a speed of $0.995c$. (a) What is the proper length of the rod? (b) What is the orientation angle in the proper frame?

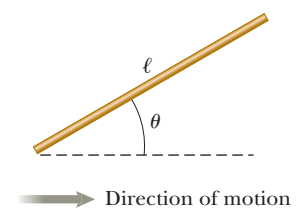


Figure P39.29

30. A rod moving with a speed v along the horizontal direction is observed to have length ℓ and to make an angle θ with respect to the direction of motion as shown in Figure P39.29. (a) Show that the length of the rod as measured by an observer at rest with respect to the rod is $\ell_p = \ell[1 - (v^2/c^2) \cos^2 \theta]^{1/2}$. (b) Show that the angle θ_p that the rod makes with the x axis according to an observer at rest with respect to the rod can be found from $\tan \theta_p = \gamma \tan \theta$. These results show that the rod is observed to be both contracted and rotated. (Take the lower end of the rod to be at the origin of the coordinate system in which the rod is at rest.)
31. Keilah, in reference frame S, measures two events to be simultaneous. Event A occurs at the point (50.0 m, 0, 0) at the instant 9:00:00 Universal time on January 15,

2013. Event B occurs at the point (150 m, 0, 0) at the same moment. Torrey, moving past with a velocity of $0.800c\hat{i}$, also observes the two events. In her reference frame S' , which event occurred first and what time interval elapsed between the events?

Section 39.6 The Lorentz Velocity Transformation Equations

- 32.** Figure P39.32 shows a jet of material (at the upper right) being ejected by galaxy M87 (at the lower left). Such jets are believed to be evidence of supermassive black holes at the center of a galaxy. Suppose two jets of material from the center of a galaxy are ejected in opposite directions. Both jets move at $0.750c$ relative to the galaxy center. Determine the speed of one jet relative to the other.




Figure P39.32

- 33.** An enemy spacecraft moves away from the Earth at a speed of $v = 0.800c$ (Fig. P39.33). A galactic patrol spacecraft pursues at a speed of $u = 0.900c$ relative to the Earth. Observers on the Earth measure the patrol craft to be overtaking the enemy craft at a relative speed of $0.100c$. With what speed is the patrol craft overtaking the enemy craft as measured by the patrol craft's crew?

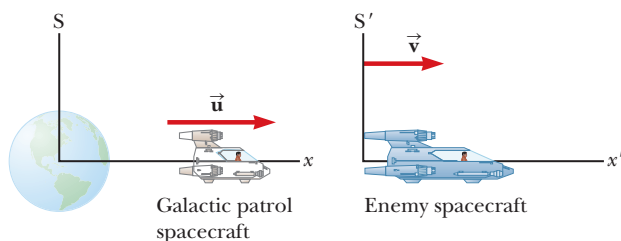


Figure P39.33

- 34.** A spacecraft is launched from the surface of the Earth with a velocity of $0.600c$ at an angle of 50.0° above the horizontal positive x axis. Another spacecraft is moving past with a velocity of $0.700c$ in the negative x direction. Determine the magnitude and direction of the velocity of the first spacecraft as measured by the pilot of the second spacecraft.
- 35.** A rocket moves with a velocity of $0.92c$ to the right with respect to a stationary observer A . An observer B moving relative to observer A finds that the rocket is moving with a velocity of $0.95c$ to the left. What is the velocity of observer B relative to observer A ? (*Hint:*

Consider observer B 's velocity in the frame of reference of the rocket.)

Section 39.7 Relativistic Linear Momentum

- 36.** Calculate the momentum of an electron moving with a speed of (a) $0.010c$, (b) $0.500c$, and (c) $0.900c$.
- 37.** An electron has a momentum that is three times larger than its classical momentum. (a) Find the speed of the electron. (b) **What If?** How would your result change if the particle were a proton?
- 38.** Show that the speed of an object having momentum of magnitude p and mass m is

$$u = \frac{c}{\sqrt{1 + (mc/p)^2}}$$

- 39.** (a) Calculate the classical momentum of a proton traveling at $0.990c$, neglecting relativistic effects. (b) Repeat the calculation while including relativistic effects. (c) Does it make sense to neglect relativity at such speeds?
- 40.** The speed limit on a certain roadway is 90.0 km/h. Suppose speeding fines are made proportional to the amount by which a vehicle's momentum exceeds the momentum it would have when traveling at the speed limit. The fine for driving at 190 km/h (that is, 100 km/h over the speed limit) is $\$80.0$. What, then, is the fine for traveling (a) at $1\,090$ km/h? (b) At $1\,000\,000\,090$ km/h?
- 41.** A golf ball travels with a speed of 90.0 m/s. By what fraction does its relativistic momentum magnitude p differ from its classical value mu ? That is, find the ratio $(p - mu)/mu$.
- 42.** The nonrelativistic expression for the momentum of a particle, $p = mu$, agrees with experiment if $u \ll c$. For what speed does the use of this equation give an error in the measured momentum of (a) 1.00% and (b) 10.0% ?
- 43.** An unstable particle at rest spontaneously breaks into two fragments of unequal mass. The mass of the first fragment is 2.50×10^{-28} kg, and that of the other is 1.67×10^{-27} kg. If the lighter fragment has a speed of $0.893c$ after the breakup, what is the speed of the heavier fragment?

Section 39.8 Relativistic Energy

- 44.** Determine the energy required to accelerate an electron from (a) $0.500c$ to $0.900c$ and (b) $0.900c$ to $0.990c$.
- 45.** An electron has a kinetic energy five times greater than its rest energy. Find (a) its total energy and (b) its speed.
- 46.** Protons in an accelerator at the Fermi National Laboratory near Chicago are accelerated to a total energy that is 400 times their rest energy. (a) What is the speed of these protons in terms of c ? (b) What is their kinetic energy in MeV?
- 47.** A proton moves at $0.950c$. Calculate its (a) rest energy, (b) total energy, and (c) kinetic energy.
- 48.** (a) Find the kinetic energy of a 78.0 -kg spacecraft launched out of the solar system with speed 106 km/s

- by using the classical equation $K = \frac{1}{2}mv^2$. (b) **What If?** Calculate its kinetic energy using the relativistic equation. (c) Explain the result of comparing the answers of parts (a) and (b).
- 49.** A proton in a high-energy accelerator moves with a speed of $c/2$. Use the work–kinetic energy theorem to find the work required to increase its speed to (a) $0.750c$ and (b) $0.995c$.
- 50.** Show that for any object moving at less than one-tenth the speed of light, the relativistic kinetic energy agrees with the result of the classical equation $K = \frac{1}{2}mv^2$ to within less than 1%. Therefore, for most purposes, the classical equation is sufficient to describe these objects.
- 51.** The total energy of a proton is twice its rest energy. Find the momentum of the proton in MeV/ c units.
- 52.** Consider electrons accelerated to a total energy of 20.0 GeV in the 3.00-km-long Stanford Linear Accelerator. (a) What is the factor γ for the electrons? (b) What is the electrons' speed at the given energy? (c) What is the length of the accelerator in the electrons' frame of reference when they are moving at their highest speed?
- 53.** When 1.00 g of hydrogen combines with 8.00 g of oxygen, 9.00 g of water is formed. During this chemical reaction, 2.86×10^5 J of energy is released. (a) Is the mass of the water larger or smaller than the mass of the reactants? (b) What is the difference in mass? (c) Explain whether the change in mass is likely to be detectable.
- 54.** In a nuclear power plant, the fuel rods last 3 yr before they are replaced. The plant can transform energy at a maximum possible rate of 1.00 GW. Supposing it operates at 80.0% capacity for 3.00 yr, what is the loss of mass of the fuel?
- 55.** The power output of the Sun is 3.85×10^{26} W. By how much does the mass of the Sun decrease each second?
- 56.** A gamma ray (a high-energy photon) can produce an electron (e^-) and a positron (e^+) of equal mass when it enters the electric field of a heavy nucleus: $\gamma \rightarrow e^+ + e^-$. What minimum gamma-ray energy is required to accomplish this task?
- 57.** A spaceship of mass 2.40×10^6 kg is to be accelerated to a speed of $0.700c$. (a) What minimum amount of energy does this acceleration require from the spaceship's fuel, assuming perfect efficiency? (b) How much fuel would it take to provide this much energy if all the rest energy of the fuel could be transformed to kinetic energy of the spaceship?
- 58.** Show that the energy–momentum relationship in Equation 39.27, $E^2 = p^2c^2 + (mc^2)^2$, follows from the expressions $E = \gamma mc^2$ and $p = \gamma mu$.
- 59.** The rest energy of an electron is 0.511 MeV. The rest energy of a proton is 938 MeV. Assume both particles have kinetic energies of 2.00 MeV. Find the speed of (a) the electron and (b) the proton. (c) By what factor does the speed of the electron exceed that of the proton? (d) Repeat the calculations in parts (a) through (c) assuming both particles have kinetic energies of 2 000 MeV.
- 60.** Consider a car moving at highway speed u . Is its actual kinetic energy larger or smaller than $\frac{1}{2}mv^2$? Make an order-of-magnitude estimate of the amount by which its actual kinetic energy differs from $\frac{1}{2}mv^2$. In your solution, state the quantities you take as data and the values you measure or estimate for them. You may find Appendix B.5 useful.
- 61.** A pion at rest ($m_\pi = 273m_e$) decays to a muon ($m_\mu = 207m_e$) and an antineutrino ($m_\nu \approx 0$). The reaction is written $\pi^- \rightarrow \mu^- + \bar{\nu}$. Find (a) the kinetic energy of the muon and (b) the energy of the antineutrino in electron volts.
- 62.** An unstable particle with mass $m = 3.34 \times 10^{-27}$ kg is initially at rest. The particle decays into two fragments that fly off along the x axis with velocity components $u_1 = 0.987c$ and $u_2 = -0.868c$. From this information, we wish to determine the masses of fragments 1 and 2. (a) Is the initial system of the unstable particle, which becomes the system of the two fragments, isolated or nonisolated? (b) Based on your answer to part (a), what two analysis models are appropriate for this situation? (c) Find the values of γ for the two fragments after the decay. (d) Using one of the analysis models in part (b), find a relationship between the masses m_1 and m_2 of the fragments. (e) Using the second analysis model in part (b), find a second relationship between the masses m_1 and m_2 . (f) Solve the relationships in parts (d) and (e) simultaneously for the masses m_1 and m_2 .
- 63.** Massive stars ending their lives in supernova explosions produce the nuclei of all the atoms in the bottom half of the periodic table by fusion of smaller nuclei. This problem roughly models that process. A particle of mass $m = 1.99 \times 10^{-26}$ kg moving with a velocity $\vec{u} = 0.500c\hat{i}$ collides head-on and sticks to a particle of mass $m' = m/3$ moving with the velocity $\vec{u}' = -0.500c\hat{i}$. What is the mass of the resulting particle?
- 64.** Massive stars ending their lives in supernova explosions produce the nuclei of all the atoms in the bottom half of the periodic table by fusion of smaller nuclei. This problem roughly models that process. A particle of mass m moving along the x axis with a velocity component $+u$ collides head-on and sticks to a particle of mass $m/3$ moving along the x axis with the velocity component $-u$. (a) What is the mass M of the resulting particle? (b) Evaluate the expression from part (a) in the limit $u \rightarrow 0$. (c) Explain whether the result agrees with what you should expect from nonrelativistic physics.

Section 39.9 The General Theory of Relativity

- 65. Review.** A global positioning system (GPS) satellite moves in a circular orbit with period 11 h 58 min. (a) Determine the radius of its orbit. (b) Determine its speed. (c) The nonmilitary GPS signal is broadcast at a frequency of 1 575.42 MHz in the reference frame of the satellite. When it is received on the Earth's surface by a GPS receiver (Fig. P39.65 on page 1230), what is

the fractional change in this frequency due to time dilation as described by special relativity? (d) The gravitational “blueshift” of the frequency according to general relativity is a separate effect. It is called a blueshift to indicate a change to a higher frequency. The magnitude of that fractional change is given by

$$\frac{\Delta f}{f} = \frac{\Delta U_g}{mc^2}$$

where U_g is the change in gravitational potential energy of an object–Earth system when the object of mass m is moved between the two points where the signal is observed. Calculate this fractional change in frequency due to the change in position of the satellite from the Earth’s surface to its orbital position. (e) What is the overall fractional change in frequency due to both time dilation and gravitational blueshift?



Figure P39.65

Additional Problems

66. An electron has a speed of $0.750c$. (a) Find the speed of a proton that has the same kinetic energy as the electron. (b) **What If?** Find the speed of a proton that has the same momentum as the electron.

67. The net nuclear fusion reaction inside the Sun can be written as $4^1\text{H} \rightarrow ^4\text{He} + E$. The rest energy of each hydrogen atom is 938.78 MeV, and the rest energy of the helium-4 atom is 3728.4 MeV. Calculate the percentage of the starting mass that is transformed to other forms of energy.

68. *Why is the following situation impossible?* On their 40th birthday, twins Speedo and Goslo say good-bye as Speedo takes off for a planet that is 50 ly away. He travels at a constant speed of $0.85c$ and immediately turns around and comes back to the Earth after arriving at the planet. Upon arriving back at the Earth, Speedo has a joyous reunion with Goslo.

69. A Doppler weather radar station broadcasts a pulse of radio waves at frequency 2.85 GHz. From a relatively small batch of raindrops at bearing 38.6° east of north, the station receives a reflected pulse after $180 \mu\text{s}$ with a frequency shifted upward by 254 Hz. From a similar batch of raindrops at bearing 39.6° east of north, the station receives a reflected pulse after the same time

delay, with a frequency shifted downward by 254 Hz. These pulses have the highest and lowest frequencies the station receives. (a) Calculate the radial velocity components of both batches of raindrops. (b) Assume that these raindrops are swirling in a uniformly rotating vortex. Find the angular speed of their rotation.

70. An object having mass 900 kg and traveling at speed $0.850c$ collides with a stationary object having mass 1400 kg. The two objects stick together. Find (a) the speed and (b) the mass of the composite object.

71. An astronaut wishes to visit the Andromeda galaxy, making a one-way trip that will take 30.0 years in the spaceship’s frame of reference. Assume the galaxy is 2.00 million light-years away and his speed is constant. (a) How fast must he travel relative to Earth? (b) What will be the kinetic energy of his spacecraft, which has mass of $1.00 \times 10^6 \text{ kg}$? (c) What is the cost of this energy if it is purchased at a typical consumer price for electric energy, 13.0¢ per kWh? The following approximation will prove useful:

$$\frac{1}{\sqrt{1+x}} \approx 1 - \frac{x}{2} \text{ for } x \ll 1$$

72. A physics professor on the Earth gives an exam to her students, who are in a spacecraft traveling at speed v relative to the Earth. The moment the craft passes the professor, she signals the start of the exam. She wishes her students to have a time interval T_0 (spacecraft time) to complete the exam. Show that she should wait a time interval (Earth time) of

$$T = T_0 \sqrt{\frac{1-v/c}{1+v/c}}$$

before sending a light signal telling them to stop. (*Suggestion:* Remember that it takes some time for the second light signal to travel from the professor to the students.)

73. An interstellar space probe is launched from Earth. After a brief period of acceleration, it moves with a constant velocity, 70.0% of the speed of light. Its nuclear-powered batteries supply the energy to keep its data transmitter active continuously. The batteries have a lifetime of 15.0 years as measured in a rest frame. (a) How long do the batteries on the space probe last as measured by mission control on Earth? (b) How far is the probe from Earth when its batteries fail as measured by mission control? (c) How far is the probe from Earth as measured by its built-in trip odometer when its batteries fail? (d) For what total time after launch are data received from the probe by mission control? Note that radio waves travel at the speed of light and fill the space between the probe and Earth at the time the battery fails.

74. The equation

$$K = \left(\frac{1}{\sqrt{1-u^2/c^2}} - 1 \right) mc^2$$

gives the kinetic energy of a particle moving at speed u . (a) Solve the equation for u . (b) From the equation for u , identify the minimum possible value of speed and the corresponding kinetic energy. (c) Identify

- the maximum possible speed and the corresponding kinetic energy. (d) Differentiate the equation for u with respect to time to obtain an equation describing the acceleration of a particle as a function of its kinetic energy and the power input to the particle. (e) Observe that for a nonrelativistic particle we have $u = (2K/m)^{1/2}$ and that differentiating this equation with respect to time gives $a = P/(2mK)^{1/2}$. State the limiting form of the expression in part (d) at low energy. State how it compares with the nonrelativistic expression. (f) State the limiting form of the expression in part (d) at high energy. (g) Consider a particle with constant input power. Explain how the answer to part (f) helps account for the answer to part (c).
- 75.** Consider the astronaut planning the trip to Andromeda in Problem 71. (a) To three significant figures, what is the value for γ for the speed found in part (a) of Problem 71? (b) Just as the astronaut leaves on his constant-speed trip, a light beam is also sent in the direction of Andromeda. According to the Earth observer, how much later does the astronaut arrive at Andromeda after the arrival of the light beam?
- 76.** An object disintegrates into two fragments. One fragment has mass $1.00 \text{ MeV}/c^2$ and momentum $1.75 \text{ MeV}/c$ in the positive x direction, and the other has mass $1.50 \text{ MeV}/c^2$ and momentum $2.00 \text{ MeV}/c$ in the positive y direction. Find (a) the mass and (b) the speed of the original object.
- 77.** The cosmic rays of highest energy are protons that have kinetic energy on the order of 10^{13} MeV . (a) As measured in the proton's frame, what time interval would a proton of this energy require to travel across the Milky Way galaxy, which has a proper diameter $\sim 10^5 \text{ ly}$? (b) From the point of view of the proton, how many kilometers across is the galaxy?
- 78.** **M** Spacecraft I, containing students taking a physics exam, approaches the Earth with a speed of $0.600c$ (relative to the Earth), while spacecraft II, containing professors proctoring the exam, moves at $0.280c$ (relative to the Earth) directly toward the students. If the professors stop the exam after 50.0 min have passed on their clock, for what time interval does the exam last as measured by (a) the students and (b) an observer on the Earth?
- 79. Review.** Around the core of a nuclear reactor shielded by a large pool of water, Cerenkov radiation appears as a blue glow. (See Fig. P17.38 on page 528.) Cerenkov radiation occurs when a particle travels faster through a medium than the speed of light in that medium. It is the electromagnetic equivalent of a bow wave or a sonic boom. An electron is traveling through water at a speed 10.0% faster than the speed of light in water. Determine the electron's (a) total energy, (b) kinetic energy, and (c) momentum. (d) Find the angle between the shock wave and the electron's direction of motion.
- 80.** The motion of a transparent medium influences the speed of light. This effect was first observed by Fizeau in 1851. Consider a light beam in water. The water moves with speed v in a horizontal pipe. Assume the light travels in the same direction as the water moves. The speed of light with respect to the water is c/n , where $n = 1.33$ is the index of refraction of water. (a) Use the velocity transformation equation to show that the speed of the light measured in the laboratory frame is
- $$u = \frac{c}{n} \left(\frac{1 + nv/c}{1 + v/n} \right)$$
- (b) Show that for $v \ll c$, the expression from part (a) becomes, to a good approximation,
- $$u \approx \frac{c}{n} + v - \frac{v^2}{n^2}$$
- (c) Argue for or against the view that we should expect the result to be $u = (c/n) + v$ according to the Galilean transformation and that the presence of the term $-v/n^2$ represents a relativistic effect appearing even at "nonrelativistic" speeds. (d) Evaluate u in the limit as the speed of the water approaches c .
- 81.** Imagine that the entire Sun, of mass M_S , collapses to a sphere of radius R_g such that the work required to remove a small mass m from the surface would be equal to its rest energy mc^2 . This radius is called the *gravitational radius* for the Sun. (a) Use this approach to show that $R_g = GM_S/c^2$. (b) Find a numerical value for R_g .
- 82.** *Why is the following situation impossible?* An experimenter is accelerating electrons for use in probing a material. She finds that when she accelerates them through a potential difference of 84.0 kV , the electrons have half the speed she wishes. She quadruples the potential difference to 336 kV , and the electrons accelerated through this potential difference have her desired speed.
- 83.** An alien spaceship traveling at $0.600c$ toward the Earth launches a landing craft. The landing craft travels in the same direction with a speed of $0.800c$ relative to the mother ship. As measured on the Earth, the spaceship is 0.200 ly from the Earth when the landing craft is launched. (a) What speed do the Earth-based observers measure for the approaching landing craft? (b) What is the distance to the Earth at the moment of the landing craft's launch as measured by the aliens? (c) What travel time is required for the landing craft to reach the Earth as measured by the aliens on the mother ship? (d) If the landing craft has a mass of $4.00 \times 10^5 \text{ kg}$, what is its kinetic energy as measured in the Earth reference frame?
- 84.** (a) Prepare a graph of the relativistic kinetic energy and the classical kinetic energy, both as a function of speed, for an object with a mass of your choice. (b) At what speed does the classical kinetic energy underestimate the experimental value by 1% ? (c) By 5% ? (d) By 50% ?
- 85.** **AMT** An observer in a coasting spacecraft moves toward a mirror at speed $v = 0.650c$ relative to the reference frame labeled S in Figure P39.85 (page 1232). The mirror is stationary with respect to S. A light pulse emitted by the spacecraft travels toward the mirror and is

reflected back to the spacecraft. The spacecraft is a distance $d = 5.66 \times 10^{10}$ m from the mirror (as measured by observers in S) at the moment the light pulse leaves the spacecraft. What is the total travel time of the pulse as measured by observers in (a) the S frame and (b) the spacecraft?

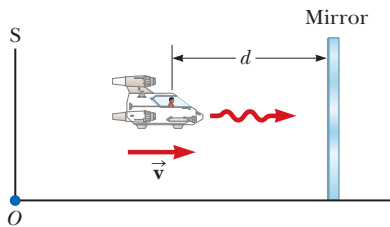


Figure P39.85 Problems 85 and 86.

86. An observer in a coasting spacecraft moves toward a mirror at speed v relative to the reference frame labeled S in Figure P39.85. The mirror is stationary with respect to S. A light pulse emitted by the spacecraft travels toward the mirror and is reflected back to the spacecraft. The spacecraft is a distance d from the mirror (as measured by observers in S) at the moment the light pulse leaves the spacecraft. What is the total travel time of the pulse as measured by observers in (a) the S frame and (b) the spacecraft?
87. A ^{57}Fe nucleus at rest emits a 14.0-keV photon. Use conservation of energy and momentum to find the kinetic energy of the recoiling nucleus in electron volts. Use $Mc^2 = 8.60 \times 10^{-9}$ J for the final state of the ^{57}Fe nucleus.

Challenge Problems

88. A particle with electric charge q moves along a straight line in a uniform electric field \vec{E} with speed u . The electric force exerted on the charge is $q\vec{E}$. The velocity of the particle and the electric field are both in the x direction. (a) Show that the acceleration of the particle in the x direction is given by

$$a = \frac{du}{dt} = \frac{qE}{m} \left(1 - \frac{u^2}{c^2}\right)^{3/2}$$

(b) Discuss the significance of the dependence of the acceleration on the speed. (c) **What If?** If the particle starts from rest at $x = 0$ at $t = 0$, how would you proceed to find the speed of the particle and its position at time t ?

89. The creation and study of new and very massive elementary particles is an important part of contemporary physics. To create a particle of mass M requires an energy Mc^2 . With enough energy, an exotic particle can be created by allowing a fast-moving proton to collide with a similar target particle. Consider a perfectly inelastic collision between two protons: an incident proton with mass m_p , kinetic energy K , and momentum magnitude p joins with an originally stationary target proton to form a single product particle of mass M . Not all the kinetic energy of the incoming proton is available to create the product particle because conservation of

momentum requires that the system as a whole still must have some kinetic energy after the collision. Therefore, only a fraction of the energy of the incident particle is available to create a new particle. (a) Show that the energy available to create a product particle is given by

$$Mc^2 = 2m_p c^2 \sqrt{1 + \frac{K}{2m_p c^2}}$$

This result shows that when the kinetic energy K of the incident proton is large compared with its rest energy $m_p c^2$, then M approaches $(2m_p K)^{1/2}/c$. Therefore, if the energy of the incoming proton is increased by a factor of 9, the mass you can create increases only by a factor of 3, not by a factor of 9 as would be expected. (b) This problem can be alleviated by using *colliding beams* as is the case in most modern accelerators. Here the total momentum of a pair of interacting particles can be zero. The center of mass can be at rest after the collision, so, in principle, all the initial kinetic energy can be used for particle creation. Show that

$$Mc^2 = 2mc^2 \left(1 + \frac{K}{mc^2}\right)$$

where K is the kinetic energy of each of the two identical colliding particles. Here, if $K \gg mc^2$, we have M directly proportional to K as we would desire.

90. Suppose our Sun is about to explode. In an effort to escape, we depart in a spacecraft at $v = 0.800c$ and head toward the star Tau Ceti, 12.0 ly away. When we reach the midpoint of our journey from the Earth, we see our Sun explode, and, unfortunately, at the same instant, we see Tau Ceti explode as well. (a) In the spacecraft's frame of reference, should we conclude that the two explosions occurred simultaneously? If not, which occurred first? (b) **What If?** In a frame of reference in which the Sun and Tau Ceti are at rest, did they explode simultaneously? If not, which exploded first?
91. Owen and Dina are at rest in frame S' , which is moving at $0.600c$ with respect to frame S. They play a game of catch while Ed, at rest in frame S, watches the action (Fig. P39.91). Owen throws the ball to Dina at $0.800c$ (according to Owen), and their separation (measured in S') is equal to 1.80×10^{12} m. (a) According to Dina, how fast is the ball moving? (b) According to Dina, what time interval is required for the ball to reach her? According to Ed, (c) how far apart are Owen and Dina, (d) how fast is the ball moving, and (e) what time interval is required for the ball to reach Dina?

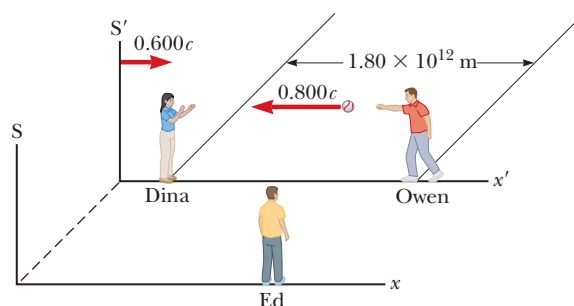
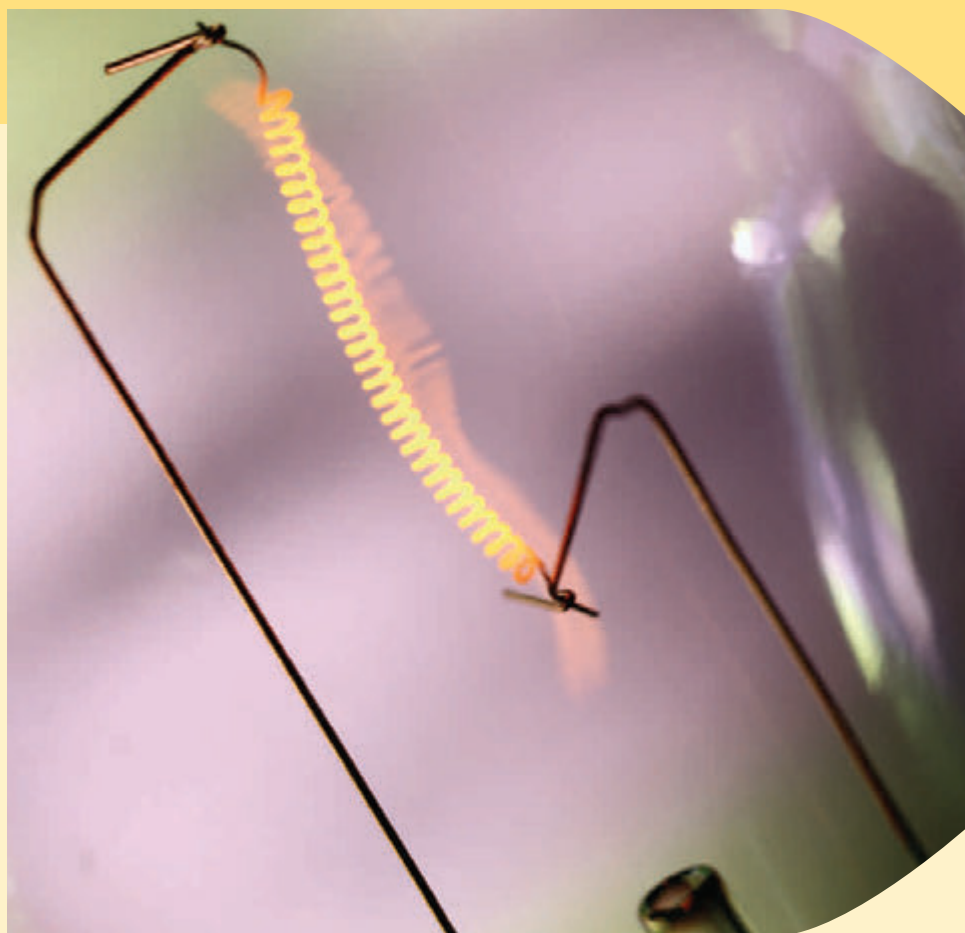


Figure P39.91

Introduction to Quantum Physics

CHAPTER

40



- 40.1 Blackbody Radiation and Planck's Hypothesis
- 40.2 The Photoelectric Effect
- 40.3 The Compton Effect
- 40.4 The Nature of Electromagnetic Waves
- 40.5 The Wave Properties of Particles
- 40.6 A New Model: The Quantum Particle
- 40.7 The Double-Slit Experiment Revisited
- 40.8 The Uncertainty Principle

In Chapter 39, we discussed that Newtonian mechanics must be replaced by Einstein's special theory of relativity when dealing with particle speeds comparable to the speed of light. As the 20th century progressed, many experimental and theoretical problems were resolved by the special theory of relativity. For many other problems, however, neither relativity nor classical physics could provide a theoretical answer. Attempts to apply the laws of classical physics to explain the behavior of matter on the atomic scale were consistently unsuccessful. For example, the emission of discrete wavelengths of light from atoms in a high-temperature gas could not be explained within the framework of classical physics.

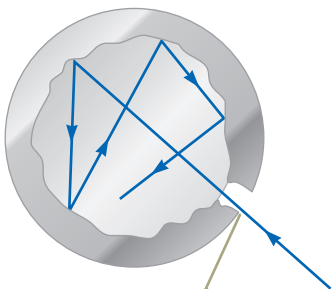
As physicists sought new ways to solve these puzzles, another revolution took place in physics between 1900 and 1930. A new theory called *quantum mechanics* was highly successful in explaining the behavior of particles of microscopic size. Like the special theory of relativity, the quantum theory requires a modification of our ideas concerning the physical world.

The first explanation of a phenomenon using quantum theory was introduced by Max Planck. Many subsequent mathematical developments and interpretations were made by a number of distinguished physicists, including Einstein, Bohr, de Broglie, Schrödinger, and

This lightbulb filament glows with an orange color. Why? Classical physics is unable to explain the experimentally observed wavelength distribution of electromagnetic radiation from a hot object. A theory proposed in 1900 and describing the radiation from such objects represents the dawn of quantum physics. (Steve Cole/Getty Images)

Pitfall Prevention 40.1

Expect to Be Challenged If the discussions of quantum physics in this and subsequent chapters seem strange and confusing to you, it's because your whole life experience has taken place in the macroscopic world, where quantum effects are not evident.



The opening to a cavity inside a hollow object is a good approximation of a black body: the hole acts as a perfect absorber.

Figure 40.1 A physical model of a black body.



Figure 40.2 The glow emanating from the spaces between these hot charcoal briquettes is, to a close approximation, blackbody radiation. The color of the light depends only on the temperature of the briquettes.

Heisenberg. Despite the great success of the quantum theory, Einstein frequently played the role of its critic, especially with regard to the manner in which the theory was interpreted.

Because an extensive study of quantum theory is beyond the scope of this book, this chapter is simply an introduction to its underlying principles.

40.1 Blackbody Radiation and Planck's Hypothesis

An object at any temperature emits electromagnetic waves in the form of **thermal radiation** from its surface as discussed in Section 20.7. The characteristics of this radiation depend on the temperature and properties of the object's surface. Careful study shows that the radiation consists of a continuous distribution of wavelengths from all portions of the electromagnetic spectrum. If the object is at room temperature, the wavelengths of thermal radiation are mainly in the infrared region and hence the radiation is not detected by the human eye. As the surface temperature of the object increases, the object eventually begins to glow visibly red, like the coils of a toaster. At sufficiently high temperatures, the glowing object appears white, as in the hot tungsten filament of an incandescent lightbulb.

From a classical viewpoint, thermal radiation originates from accelerated charged particles in the atoms near the surface of the object; those charged particles emit radiation much as small antennas do. The thermally agitated particles can have a distribution of energies, which accounts for the continuous spectrum of radiation emitted by the object. By the end of the 19th century, however, it became apparent that the classical theory of thermal radiation was inadequate. The basic problem was in understanding the observed distribution of wavelengths in the radiation emitted by a black body. As defined in Section 20.7, a **black body** is an ideal system that absorbs all radiation incident on it. The electromagnetic radiation emitted by the black body is called **blackbody radiation**.

A good approximation of a black body is a small hole leading to the inside of a hollow object as shown in Figure 40.1. Any radiation incident on the hole from outside the cavity enters the hole and is reflected a number of times on the interior walls of the cavity; hence, the hole acts as a perfect absorber. The nature of the radiation leaving the cavity through the hole depends only on the temperature of the cavity walls and not on the material of which the walls are made. The spaces between lumps of hot charcoal (Fig. 40.2) emit light that is very much like blackbody radiation.

The radiation emitted by oscillators in the cavity walls in Figure 40.1 experiences boundary conditions and can be analyzed using the waves under boundary conditions analysis model. As the radiation reflects from the cavity's walls, standing electromagnetic waves are established within the three-dimensional interior of the cavity. Many standing-wave modes are possible, and the distribution of the energy in the cavity among these modes determines the wavelength distribution of the radiation leaving the cavity through the hole.

The wavelength distribution of radiation from cavities was studied experimentally in the late 19th century. Figure 40.3 shows how the intensity of blackbody radiation varies with temperature and wavelength. The following two consistent experimental findings were seen as especially significant:

1. The total power of the emitted radiation increases with temperature.

We discussed this behavior briefly in Chapter 20, where we introduced **Stefan's law**:

$$P = \sigma A \epsilon T^4 \quad (40.1)$$

where P is the power in watts radiated at all wavelengths from the surface of an object, $\sigma = 5.670 \times 10^{-8} \text{ W/m}^2 \cdot \text{K}^4$ is the Stefan–Boltzmann constant, A is the surface area of the object in square meters, ϵ is the emissivity of the

Stefan's law ▶

surface, and T is the surface temperature in kelvins. For a black body, the emissivity is $e = 1$ exactly.

2. **The peak of the wavelength distribution shifts to shorter wavelengths as the temperature increases.** This behavior is described by the following relationship, called **Wien's displacement law**:

$$\lambda_{\max} T = 2.898 \times 10^{-3} \text{ m} \cdot \text{K} \quad (40.2)$$

where λ_{\max} is the wavelength at which the curve peaks and T is the absolute temperature of the surface of the object emitting the radiation. The wavelength at the curve's peak is inversely proportional to the absolute temperature; that is, as the temperature increases, the peak is "displaced" to shorter wavelengths (Fig. 40.3).

Wien's displacement law is consistent with the behavior of the object mentioned at the beginning of this section. At room temperature, the object does not appear to glow because the peak is in the infrared region of the electromagnetic spectrum. At higher temperatures, it glows red because the peak is in the near infrared with some radiation at the red end of the visible spectrum, and at still higher temperatures, it glows white because the peak is in the visible so that all colors are emitted.

- Quick Quiz 40.1** Figure 40.4 shows two stars in the constellation Orion. Betelgeuse appears to glow red, whereas Rigel looks blue in color. Which star has a higher surface temperature? (a) Betelgeuse (b) Rigel (c) both the same (d) impossible to determine



John Chumack/Photo Researchers, Inc.

Figure 40.4 (Quick Quiz 40.1) Which star is hotter, Betelgeuse or Rigel?

A successful theory for blackbody radiation must predict the shape of the curves in Figure 40.3, the temperature dependence expressed in Stefan's law, and the shift of the peak with temperature described by Wien's displacement law. Early attempts to use classical ideas to explain the shapes of the curves in Figure 40.3 failed.

Let's consider one of these early attempts. To describe the distribution of energy from a black body, we define $I(\lambda, T) d\lambda$ to be the intensity, or power per unit area, emitted in the wavelength interval $d\lambda$. The result of a calculation based on a classical theory of blackbody radiation known as the **Rayleigh-Jeans law** is

$$I(\lambda, T) = \frac{2\pi ck_B T}{\lambda^4} \quad (40.3)$$

where k_B is Boltzmann's constant. The black body is modeled as the hole leading into a cavity (Fig. 40.1), resulting in many modes of oscillation of the electromagnetic field caused by accelerated charges in the cavity walls and the emission of electromagnetic waves at all wavelengths. In the classical theory used to derive

◀ Wien's displacement law

The 4 000-K curve has a peak near the visible range. This curve represents an object that would glow with a yellowish-white appearance.

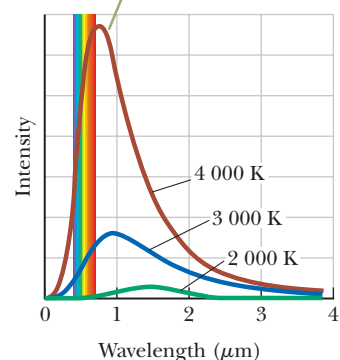


Figure 40.3 Intensity of blackbody radiation versus wavelength at three temperatures. The visible range of wavelengths is between $0.4 \mu\text{m}$ and $0.7 \mu\text{m}$. At approximately $6\,000 \text{ K}$, the peak is in the center of the visible wavelengths and the object appears white.

◀ Rayleigh-Jeans law

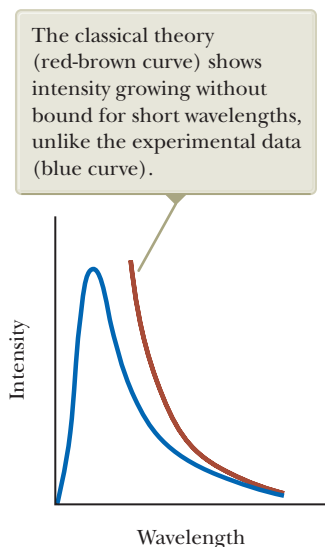


Figure 40.5 Comparison of experimental results and the curve predicted by the Rayleigh-Jeans law for the distribution of blackbody radiation.

Equation 40.3, the average energy for each wavelength of the standing-wave modes is assumed to be proportional to $k_B T$, based on the theorem of equipartition of energy discussed in Section 21.1.

An experimental plot of the blackbody radiation spectrum, together with the theoretical prediction of the Rayleigh-Jeans law, is shown in Figure 40.5. At long wavelengths, the Rayleigh-Jeans law is in reasonable agreement with experimental data, but at short wavelengths, major disagreement is apparent.

As λ approaches zero, the function $I(\lambda, T)$ given by Equation 40.3 approaches infinity. Hence, according to classical theory, not only should short wavelengths predominate in a blackbody spectrum, but also the energy emitted by any black body should become infinite in the limit of zero wavelength. In contrast to this prediction, the experimental data plotted in Figure 40.5 show that as λ approaches zero, $I(\lambda, T)$ also approaches zero. This mismatch of theory and experiment was so disconcerting that scientists called it the *ultraviolet catastrophe*. (This “catastrophe”—infinite energy—occurs as the wavelength approaches zero; the word *ultraviolet* was applied because ultraviolet wavelengths are short.)

In 1900, Max Planck developed a theory of blackbody radiation that leads to an equation for $I(\lambda, T)$ that is in complete agreement with experimental results at all wavelengths. In discussing this theory, we use the outline of properties of structural models introduced in Chapter 21:

1. *Physical components:*

Planck assumed the cavity radiation came from atomic oscillators in the cavity walls in Figure 40.1.

2. *Behavior of the components:*

(a) The energy of an oscillator can have only certain *discrete* values E_n :

$$E_n = nhf \quad (40.4)$$

where n is a positive integer called a **quantum number**,¹ f is the oscillator’s frequency, and h is a parameter Planck introduced that is now called **Planck’s constant**. Because the energy of each oscillator can have only discrete values given by Equation 40.4, we say the energy is **quantized**. Each discrete energy value corresponds to a different **quantum state**, represented by the quantum number n . When the oscillator is in the $n = 1$ quantum state, its energy is hf ; when it is in the $n = 2$ quantum state, its energy is $2hf$; and so on.

(b) The oscillators emit or absorb energy when making a transition from one quantum state to another. The entire energy difference between the initial and final states in the transition is emitted or absorbed as a single quantum of radiation. If the transition is from one state to a lower adjacent state—say, from the $n = 3$ state to the $n = 2$ state—Equation 40.4 shows that the amount of energy emitted by the oscillator and carried by the quantum of radiation is

$$E = hf \quad (40.5)$$

According to property 2(b), an oscillator emits or absorbs energy only when it changes quantum states. If it remains in one quantum state, no energy is absorbed or emitted. Figure 40.6 is an **energy-level diagram** showing the quantized energy levels and allowed transitions proposed by Planck. This important semigraphical representation is used often in quantum physics.² The vertical axis is linear in energy, and the allowed energy levels are represented as horizontal lines. The quantized system can have only the energies represented by the horizontal lines.



© Bettmann/CORBIS

Max Planck

German Physicist (1858–1947)

Planck introduced the concept of “quantum of action” (Planck’s constant, h) in an attempt to explain the spectral distribution of blackbody radiation, which laid the foundations for quantum theory. In 1918, he was awarded the Nobel Prize in Physics for this discovery of the quantized nature of energy.

¹A quantum number is generally an integer (although half-integer quantum numbers can occur) that describes an allowed state of a system, such as the values of n describing the normal modes of oscillation of a string fixed at both ends, as discussed in Section 18.3.

²We first saw an energy-level diagram in Section 21.3.

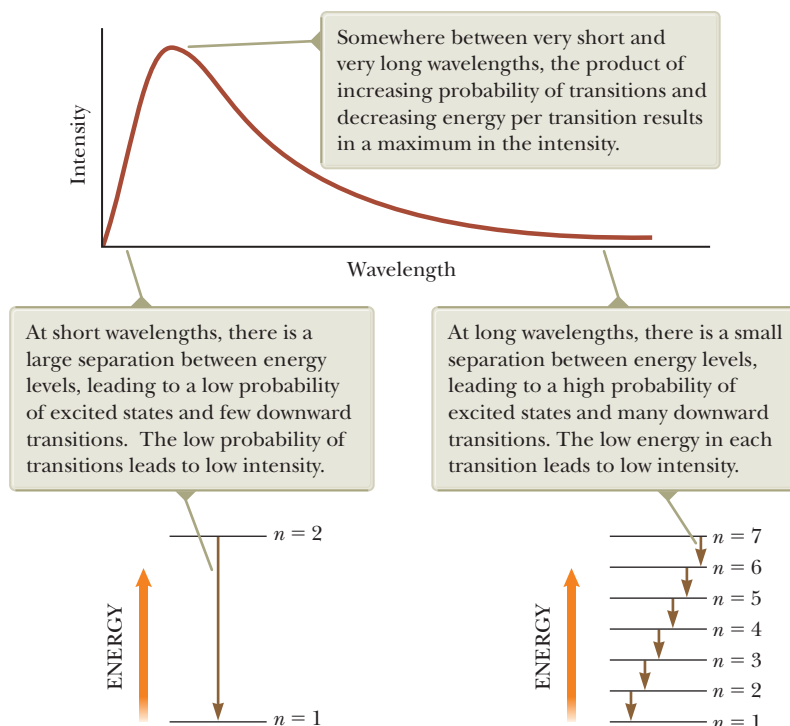
The key point in Planck's theory is the radical assumption of quantized energy states. This development—a clear deviation from classical physics—marked the birth of the quantum theory.

In the Rayleigh–Jeans model, the average energy associated with a particular wavelength of standing waves in the cavity is the same for all wavelengths and is equal to $k_B T$. Planck used the same classical ideas as in the Rayleigh–Jeans model to arrive at the energy density as a product of constants and the average energy for a given wavelength, but the average energy is not given by the equipartition theorem. A wave's average energy is the average energy difference between levels of the oscillator, *weighted according to the probability of the wave being emitted*. This weighting is based on the occupation of higher-energy states as described by the Boltzmann distribution law, which was discussed in Section 21.5. According to this law, the probability of a state being occupied is proportional to the factor $e^{-E/k_B T}$, where E is the energy of the state.

At low frequencies (long wavelengths), according to property 2(a), the energy levels are close together as on the right in Figure 40.7, and many of the energy states are excited because the Boltzmann factor $e^{-E/k_B T}$ is relatively large for these states. Therefore, there are many contributions to the outgoing radiation, although each contribution has very low energy. Now, consider high-frequency radiation, that is, radiation with short wavelength. To obtain this radiation, the allowed energies are very far apart as on the left in Figure 40.7. The probability of thermal agitation exciting these high energy levels is small because of the small value of the Boltzmann factor for large values of E . At high frequencies, the low probability of excitation results in very little contribution to the total energy, even though each quantum is of large energy. This low probability “turns the curve over” and brings it down to zero again at short wavelengths.

Using this approach, Planck generated a theoretical expression for the wavelength distribution that agreed remarkably well with the experimental curves in Figure 40.3:

$$I(\lambda, T) = \frac{2\pi hc^2}{\lambda^5 (e^{hc/\lambda k_B T} - 1)} \quad (40.6)$$



Pitfall Prevention 40.2

n Is Again an Integer In the preceding chapters on optics, we used the symbol n for the index of refraction, which was not an integer. Here we are again using n as we did in Chapter 18 to indicate the standing-wave mode on a string or in an air column. In quantum physics, n is often used as an integer quantum number to identify a particular quantum state of a system.

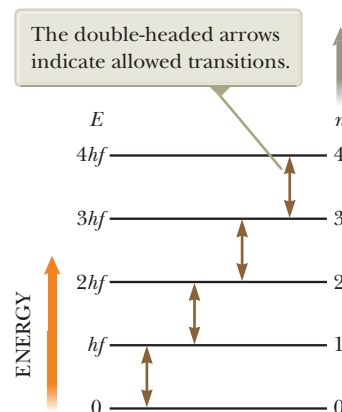


Figure 40.6 Allowed energy levels for an oscillator with frequency f .

Planck's wavelength distribution function

Figure 40.7 In Planck's model, the average energy associated with a given wavelength is the product of the energy of a transition and a factor related to the probability of the transition occurring.

This function includes the parameter h , which Planck adjusted so that his curve matched the experimental data at all wavelengths. The value of this parameter is found to be independent of the material of which the black body is made and independent of the temperature; it is a fundamental constant of nature. The value of h , Planck's constant, which was first introduced in Chapter 35, is

Planck's constant ►

$$h = 6.626 \times 10^{-34} \text{ J} \cdot \text{s} \quad (40.7)$$

At long wavelengths, Equation 40.6 reduces to the Rayleigh–Jeans expression, Equation 40.3 (see Problem 14), and at short wavelengths, it predicts an exponential decrease in $I(\lambda, T)$ with decreasing wavelength, in agreement with experimental results.

When Planck presented his theory, most scientists (including Planck!) did not consider the quantum concept to be realistic. They believed it was a mathematical trick that happened to predict the correct results. Hence, Planck and others continued to search for a more “rational” explanation of blackbody radiation. Subsequent developments, however, showed that a theory based on the quantum concept (rather than on classical concepts) had to be used to explain not only blackbody radiation but also a number of other phenomena at the atomic level.

In 1905, Einstein rederived Planck's results by assuming the oscillations of the electromagnetic field were themselves quantized. In other words, he proposed that quantization is a fundamental property of light and other electromagnetic radiation, which led to the concept of photons as shall be discussed in Section 40.2. Critical to the success of the quantum or photon theory was the relation between energy and frequency, which classical theory completely failed to predict.

You may have had your body temperature measured at the doctor's office by an *ear thermometer*, which can read your temperature very quickly (Fig. 40.8). In a fraction of a second, this type of thermometer measures the amount of infrared radiation emitted by the eardrum. It then converts the amount of radiation into a temperature reading. This thermometer is very sensitive because temperature is raised to the fourth power in Stefan's law. Suppose you have a fever 1°C above normal. Because absolute temperatures are found by adding 273 to Celsius temperatures, the ratio of your fever temperature to normal body temperature of 37°C is

$$\frac{T_{\text{fever}}}{T_{\text{normal}}} = \frac{38^\circ\text{C} + 273^\circ\text{C}}{37^\circ\text{C} + 273^\circ\text{C}} = 1.0032$$

which is only a 0.32% increase in temperature. The increase in radiated power, however, is proportional to the fourth power of temperature, so

$$\frac{P_{\text{fever}}}{P_{\text{normal}}} = \left(\frac{38^\circ\text{C} + 273^\circ\text{C}}{37^\circ\text{C} + 273^\circ\text{C}} \right)^4 = 1.013$$

The result is a 1.3% increase in radiated power, which is easily measured by modern infrared radiation sensors.



© Cengage Learning/Edward L. Doud, Jr.

Figure 40.8 An ear thermometer measures a patient's temperature by detecting the intensity of infrared radiation leaving the eardrum.

Example 40.1 Thermal Radiation from Different Objects

(A) Find the peak wavelength of the blackbody radiation emitted by the human body when the skin temperature is 35°C .

SOLUTION

Conceptualize Thermal radiation is emitted from the surface of any object. The peak wavelength is related to the surface temperature through Wien's displacement law (Eq. 40.2).

Categorize We evaluate results using an equation developed in this section, so we categorize this example as a substitution problem.

▶ 40.1 continued

Solve Equation 40.2 for λ_{\max} :

$$(1) \quad \lambda_{\max} = \frac{2.898 \times 10^{-3} \text{ m} \cdot \text{K}}{T}$$

Substitute the surface temperature:

$$\lambda_{\max} = \frac{2.898 \times 10^{-3} \text{ m} \cdot \text{K}}{308 \text{ K}} = 9.41 \mu\text{m}$$

This radiation is in the infrared region of the spectrum and is invisible to the human eye. Some animals (pit vipers, for instance) are able to detect radiation of this wavelength and therefore can locate warm-blooded prey even in the dark.

(B) Find the peak wavelength of the blackbody radiation emitted by the tungsten filament of a lightbulb, which operates at 2 000 K.

SOLUTION

Substitute the filament temperature into Equation (1):

$$\lambda_{\max} = \frac{2.898 \times 10^{-3} \text{ m} \cdot \text{K}}{2\,000 \text{ K}} = 1.45 \mu\text{m}$$

This radiation is also in the infrared, meaning that most of the energy emitted by a lightbulb is not visible to us.

(C) Find the peak wavelength of the blackbody radiation emitted by the Sun, which has a surface temperature of approximately 5 800 K.

SOLUTION

Substitute the surface temperature into Equation (1):

$$\lambda_{\max} = \frac{2.898 \times 10^{-3} \text{ m} \cdot \text{K}}{5\,800 \text{ K}} = 0.500 \mu\text{m}$$

This radiation is near the center of the visible spectrum, near the color of a yellow-green tennis ball. Because it is the most prevalent color in sunlight, our eyes have evolved to be most sensitive to light of approximately this wavelength.

Example 40.2 The Quantized Oscillator **AM**

A 2.00-kg block is attached to a massless spring that has a force constant of $k = 25.0 \text{ N/m}$. The spring is stretched 0.400 m from its equilibrium position and released from rest.

(A) Find the total energy of the system and the frequency of oscillation according to classical calculations.

SOLUTION

Conceptualize We understand the details of the block's motion from our study of simple harmonic motion in Chapter 15. Review that material if you need to.

Categorize The phrase "according to classical calculations" tells us to categorize this part of the problem as a classical analysis of the oscillator. We model the block as a *particle in simple harmonic motion*.

Analyze Based on the way the block is set into motion, its amplitude is 0.400 m.

Evaluate the total energy of the block–spring system using Equation 15.21:

$$E = \frac{1}{2}kA^2 = \frac{1}{2}(25.0 \text{ N/m})(0.400 \text{ m})^2 = 2.00 \text{ J}$$

Evaluate the frequency of oscillation from Equation 15.14:

$$f = \frac{1}{2\pi} \sqrt{\frac{k}{m}} = \frac{1}{2\pi} \sqrt{\frac{25.0 \text{ N/m}}{2.00 \text{ kg}}} = 0.563 \text{ Hz}$$

(B) Assuming the energy of the oscillator is quantized, find the quantum number n for the system oscillating with this amplitude.

continued

40.2 continued

SOLUTION

Categorize This part of the problem is categorized as a quantum analysis of the oscillator. We model the block–spring system as a Planck oscillator.

Analyze Solve Equation 40.4 for the quantum number n :

$$n = \frac{E_n}{hf}$$

Substitute numerical values:

$$n = \frac{2.00 \text{ J}}{(6.626 \times 10^{-34} \text{ J} \cdot \text{s})(0.563 \text{ Hz})} = 5.36 \times 10^{33}$$

Finalize Notice that 5.36×10^{33} is a very large quantum number, which is typical for macroscopic systems. Changes between quantum states for the oscillator are explored next.

WHAT IF? Suppose the oscillator makes a transition from the $n = 5.36 \times 10^{33}$ state to the state corresponding to $n = 5.36 \times 10^{33} - 1$. By how much does the energy of the oscillator change in this one-quantum change?

Answer From Equation 40.5 and the result to part (A), the energy carried away due to the transition between states differing in n by 1 is

$$E = hf = (6.626 \times 10^{-34} \text{ J} \cdot \text{s})(0.563 \text{ Hz}) = 3.73 \times 10^{-34} \text{ J}$$

This energy change due to a one-quantum change is fractionally equal to $3.73 \times 10^{-34} \text{ J}/2.00 \text{ J}$, or on the order of one part in 10^{34} ! It is such a small fraction of the total energy of the oscillator that it cannot be detected. Therefore, even though the energy of a macroscopic block–spring system is quantized and does indeed decrease by small quantum jumps, our senses perceive the decrease as continuous. Quantum effects become important and detectable only on the submicroscopic level of atoms and molecules.

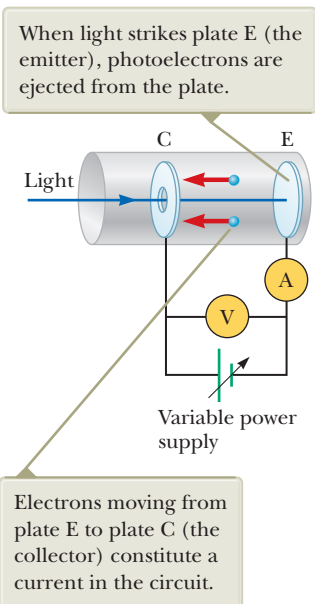


Figure 40.9 A circuit diagram for studying the photoelectric effect.

40.2 The Photoelectric Effect

Blackbody radiation was the first phenomenon to be explained with a quantum model. In the latter part of the 19th century, at the same time that data were taken on thermal radiation, experiments showed that light incident on certain metallic surfaces causes electrons to be emitted from those surfaces. This phenomenon, which was first discussed in Section 35.1, is known as the **photoelectric effect**, and the emitted electrons are called **photoelectrons**.³

Figure 40.9 is a diagram of an apparatus for studying the photoelectric effect. An evacuated glass or quartz tube contains a metallic plate E (the emitter) connected to the negative terminal of a battery and another metallic plate C (the collector) that is connected to the positive terminal of the battery. When the tube is kept in the dark, the ammeter reads zero, indicating no current in the circuit. However, when plate E is illuminated by light having an appropriate wavelength, a current is detected by the ammeter, indicating a flow of charges across the gap between plates E and C. This current arises from photoelectrons emitted from plate E and collected at plate C.

Figure 40.10 is a plot of photoelectric current versus potential difference ΔV applied between plates E and C for two light intensities. At large values of ΔV , the current reaches a maximum value; all the electrons emitted from E are collected at C, and the current cannot increase further. In addition, the maximum current increases as the intensity of the incident light increases, as you might expect,

³Photoelectrons are not different from other electrons. They are given this name solely because of their ejection from a metal by light in the photoelectric effect.

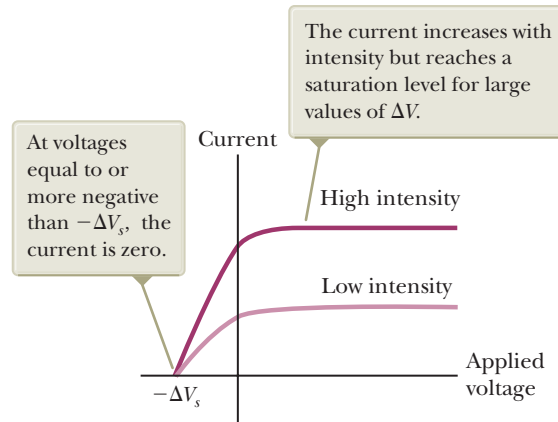


Figure 40.10 Photoelectric current versus applied potential difference for two light intensities.

because more electrons are ejected by the higher-intensity light. Finally, when ΔV is negative—that is, when the battery in the circuit is reversed to make plate E positive and plate C negative—the current drops because many of the photoelectrons emitted from E are repelled by the now negative plate C. In this situation, only those photoelectrons having a kinetic energy greater than $e|\Delta V|$ reach plate C, where e is the magnitude of the charge on the electron. When ΔV is equal to or more negative than $-\Delta V_s$, where ΔV_s is the **stopping potential**, no photoelectrons reach C and the current is zero.

Let's model the combination of the electric field between the plates and an electron ejected from plate E as an isolated system. Suppose this electron stops just as it reaches plate C. Because the system is isolated, the appropriate reduction of Equation 8.2 is

$$\Delta K + \Delta U = 0$$

where the initial configuration is at the instant the electron leaves the metal with kinetic energy K_i and the final configuration is when the electron stops just before touching plate C. If we define the electric potential energy of the system in the initial configuration to be zero, we have

$$(0 - K_i) + [(q)(\Delta V) - 0] = 0 \rightarrow K_i = q\Delta V = -e\Delta V$$

Now suppose the potential difference ΔV is increased in the negative direction just until the current is zero at $\Delta V = -\Delta V_s$. In this case, the electron that stops immediately before reaching plate C has the maximum possible kinetic energy upon leaving the metal surface. The previous equation can then be written as

$$K_{\max} = e \Delta V_s \quad (40.8)$$

This equation allows us to measure K_{\max} experimentally by determining the magnitude of the voltage ΔV_s at which the current drops to zero.

Several features of the photoelectric effect are listed below. For each feature, we compare the predictions made by a classical approach, using the wave model for light, with the experimental results.

1. Dependence of photoelectron kinetic energy on light intensity

Classical prediction: Electrons should absorb energy continuously from the electromagnetic waves. As the light intensity incident on a metal is increased, energy should be transferred into the metal at a higher rate and the electrons should be ejected with more kinetic energy.

Experimental result: The maximum kinetic energy of photoelectrons is *independent* of light intensity as shown in Figure 40.10 with both curves falling to zero at the *same* negative voltage. (According to Equation 40.8, the maximum kinetic energy is proportional to the stopping potential.)

2. Time interval between incidence of light and ejection of photoelectrons

Classical prediction: At low light intensities, a measurable time interval should pass between the instant the light is turned on and the time an electron is ejected from the metal. This time interval is required for the electron to absorb the incident radiation before it acquires enough energy to escape from the metal.

Experimental result: Electrons are emitted from the surface of the metal almost *instantaneously* (less than 10^{-9} s after the surface is illuminated), even at very low light intensities.

3. Dependence of ejection of electrons on light frequency

Classical prediction: Electrons should be ejected from the metal at any incident light frequency, as long as the light intensity is high enough, because energy is transferred to the metal regardless of the incident light frequency.

Experimental result: No electrons are emitted if the incident light frequency falls below some **cutoff frequency** f_c , whose value is characteristic of the material being illuminated. No electrons are ejected below this cutoff frequency *regardless* of the light intensity.

4. Dependence of photoelectron kinetic energy on light frequency

Classical prediction: There should be *no* relationship between the frequency of the light and the electron kinetic energy. The kinetic energy should be related to the intensity of the light.

Experimental result: The maximum kinetic energy of the photoelectrons increases with increasing light frequency.

For these features, experimental results contradict *all four* classical predictions. A successful explanation of the photoelectric effect was given by Einstein in 1905, the same year he published his special theory of relativity. As part of a general paper on electromagnetic radiation, for which he received a Nobel Prize in Physics in 1921, Einstein extended Planck's concept of quantization to electromagnetic waves as mentioned in Section 40.1. Einstein assumed light (or any other electromagnetic wave) of frequency f from *any* source can be considered a stream of quanta. Today we call these quanta **photons**. Each photon has an energy E given by Equation 40.5, $E = hf$, and each moves in a vacuum at the speed of light c , where $c = 3.00 \times 10^8$ m/s.

- Quick Quiz 40.2** While standing outdoors one evening, you are exposed to the following four types of electromagnetic radiation: yellow light from a sodium street lamp, radio waves from an AM radio station, radio waves from an FM radio station, and microwaves from an antenna of a communications system.
- Rank these types of waves in terms of photon energy from highest to lowest.

Let us organize Einstein's model for the photoelectric effect using the properties of structural models:

1. *Physical components:*

We imagine the system to consist of two physical components: (1) an electron that is to be ejected by an incoming photon and (2) the remainder of the metal.

2. *Behavior of the components:*

(a) In Einstein's model, a photon of the incident light gives *all* its energy hf to a *single* electron in the metal. Therefore, the absorption of energy by the electrons is not a continuous process as envisioned in the wave model, but rather a discontinuous process in which energy is delivered to the electrons in bundles. The energy transfer is accomplished via a one-photon/one-electron event.⁴

⁴In principle, two photons could combine to provide an electron with their combined energy. That is highly improbable, however, without the high intensity of radiation available from very strong lasers.

(b) We can describe the time evolution of the system by applying the non-isolated system model for energy over a time interval that includes the absorption of one photon and the ejection of the corresponding electron. Energy is transferred into the system by electromagnetic radiation, the photon. The system has two types of energy: the potential energy of the metal–electron system and the kinetic energy of the ejected electron. Therefore, we can write the conservation of energy equation (Eq. 8.2) as

$$\Delta K + \Delta U = T_{\text{ER}} \quad (40.9)$$

The energy transfer into the system is that of the photon, $T_{\text{ER}} = hf$. During the process, the kinetic energy of the electron increases from zero to its final value, which we assume to be the maximum possible value K_{max} . The potential energy of the system increases because the electron is pulled away from the metal to which it is attracted. We define the potential energy of the system when the electron is outside the metal as zero. The potential energy of the system when the electron is in the metal is $U = -\phi$, where ϕ is called the **work function** of the metal. The work function represents the minimum energy with which an electron is bound in the metal and is on the order of a few electron volts. Table 40.1 lists selected values. The increase in potential energy of the system when the electron is removed from the metal is the work function ϕ . Substituting these energies into Equation 40.9, we have

$$\begin{aligned} (K_{\text{max}} - 0) + [0 - (-\phi)] &= hf \\ K_{\text{max}} + \phi &= hf \end{aligned} \quad (40.10)$$

If the electron makes collisions with other electrons or metal ions as it is being ejected, some of the incoming energy is transferred to the metal and the electron is ejected with less kinetic energy than K_{max} .

The prediction made by Einstein is an equation for the maximum kinetic energy of an ejected electron as a function of frequency of the illuminating radiation. This equation can be found by rearranging Equation 40.10:

$$K_{\text{max}} = hf - \phi \quad (40.11)$$

With Einstein's structural model, one can explain the observed features of the photoelectric effect that cannot be understood using classical concepts:

1. Dependence of photoelectron kinetic energy on light intensity

Equation 40.11 shows that K_{max} is independent of the light intensity. The maximum kinetic energy of any one electron, which equals $hf - \phi$, depends only on the light frequency and the work function. If the light intensity is doubled, the number of photons arriving per unit time is doubled, which doubles the rate at which photoelectrons are emitted. The maximum kinetic energy of any one photoelectron, however, is unchanged.

2. Time interval between incidence of light and ejection of photoelectrons

Near-instantaneous emission of electrons is consistent with the photon model of light. The incident energy appears in small packets, and there is a one-to-one interaction between photons and electrons. If the incident light has very low intensity, there are very few photons arriving per unit time interval; each photon, however, can have sufficient energy to eject an electron immediately.

3. Dependence of ejection of electrons on light frequency

Because the photon must have energy greater than the work function ϕ to eject an electron, the photoelectric effect cannot be observed below a

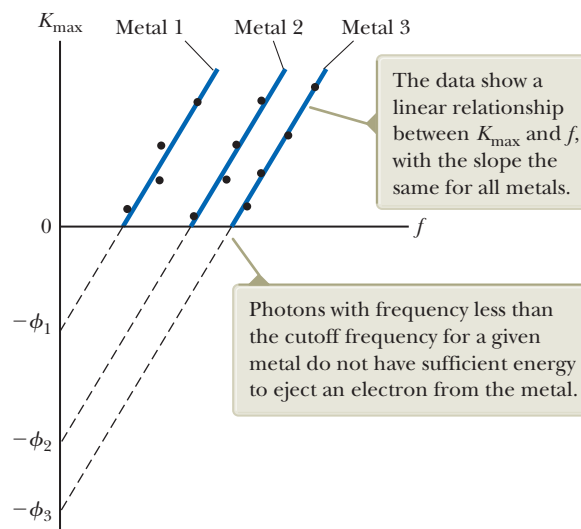
Table 40.1 Work Functions of Selected Metals

Metal	ϕ (eV)
Na	2.46
Al	4.08
Fe	4.50
Cu	4.70
Zn	4.31
Ag	4.73
Pt	6.35
Pb	4.14

Note: Values are typical for metals listed. Actual values may vary depending on whether the metal is a single crystal or polycrystalline. Values may also depend on the face from which electrons are ejected from crystalline metals. Furthermore, different experimental procedures may produce differing values.

◀ Photoelectric effect equation

Figure 40.11 A plot of K_{\max} for photoelectrons versus frequency of incident light in a typical photoelectric effect experiment.



certain cutoff frequency. If the energy of an incoming photon does not satisfy this requirement, an electron cannot be ejected from the surface, even though many photons per unit time are incident on the metal in a very intense light beam.

4. Dependence of photoelectron kinetic energy on light frequency

A photon of higher frequency carries more energy and therefore ejects a photoelectron with more kinetic energy than does a photon of lower frequency.

Einstein's model predicts a linear relationship (Eq. 40.11) between the maximum electron kinetic energy K_{\max} and the light frequency f . Experimental observation of a linear relationship between K_{\max} and f would be a final confirmation of Einstein's theory. Indeed, such a linear relationship was observed experimentally within a few years of Einstein's theory and is sketched in Figure 40.11. The slope of the lines in such a plot is Planck's constant h . The intercept on the horizontal axis gives the cutoff frequency below which no photoelectrons are emitted. The cutoff frequency is related to the work function through the relationship $f_c = \phi/h$. The cutoff frequency corresponds to a **cutoff wavelength** λ_c , where

Cutoff wavelength ►

$$\lambda_c = \frac{c}{f_c} = \frac{c}{\phi/h} = \frac{hc}{\phi} \quad (40.12)$$

and c is the speed of light. Wavelengths greater than λ_c incident on a material having a work function ϕ do not result in the emission of photoelectrons.

The combination hc in Equation 40.12 often occurs when relating a photon's energy to its wavelength. A common shortcut when solving problems is to express this combination in useful units according to the following approximation:

$$hc = 1\,240 \text{ eV} \cdot \text{nm}$$

One of the first practical uses of the photoelectric effect was as the detector in a camera's light meter. Light reflected from the object to be photographed strikes a photoelectric surface in the meter, causing it to emit photoelectrons that then pass through a sensitive ammeter. The magnitude of the current in the ammeter depends on the light intensity.

The phototube, another early application of the photoelectric effect, acts much like a switch in an electric circuit. It produces a current in the circuit when light of sufficiently high frequency falls on a metal plate in the phototube, but produces no current in the dark. Phototubes were used in burglar alarms and in the detection of the soundtrack on motion picture film. Modern semiconductor devices have now replaced older devices based on the photoelectric effect.

Today, the photoelectric effect is used in the operation of photomultiplier tubes. Figure 40.12 shows the structure of such a device. A photon striking the photocathode ejects an electron by means of the photoelectric effect. This electron accelerates across the potential difference between the photocathode and the first *dynode*, shown as being at +200 V relative to the photocathode in Figure 40.12. This high-energy electron strikes the dynode and ejects several more electrons. The same process is repeated through a series of dynodes at ever higher potentials until an electrical pulse is produced as millions of electrons strike the last dynode. The tube is therefore called a *multiplier*: one photon at the input has resulted in millions of electrons at the output.

The photomultiplier tube is used in nuclear detectors to detect photons produced by the interaction of energetic charged particles or gamma rays with certain materials. It is also used in astronomy in a technique called *photoelectric photometry*. In that technique, the light collected by a telescope from a single star is allowed to fall on a photomultiplier tube for a time interval. The tube measures the total energy transferred by light during the time interval, which can then be converted to a luminosity of the star.

The photomultiplier tube is being replaced in many astronomical observations with a *charge-coupled device* (CCD), which is the same device used in a digital camera (Section 36.6). Half of the 2009 Nobel Prize in Physics was awarded to Willard S. Boyle (b. 1924) and George E. Smith (b. 1930) for their 1969 invention of the charge-coupled device. In a CCD, an array of pixels is formed on the silicon surface of an integrated circuit (Section 43.7). When the surface is exposed to light from an astronomical scene through a telescope or a terrestrial scene through a digital camera, electrons generated by the photoelectric effect are caught in “traps” beneath the surface. The number of electrons is related to the intensity of the light striking the surface. A signal processor measures the number of electrons associated with each pixel and converts this information into a digital code that a computer can use to reconstruct and display the scene.

The *electron bombardment CCD camera* allows higher sensitivity than a conventional CCD. In this device, electrons ejected from a photocathode by the photoelectric effect are accelerated through a high voltage before striking a CCD array. The higher energy of the electrons results in a very sensitive detector of low-intensity radiation.

Quick Quiz 40.3 Consider one of the curves in Figure 40.10. Suppose the intensity of the incident light is held fixed but its frequency is increased. Does the stopping potential in Figure 40.10 (a) remain fixed, (b) move to the right, or (c) move to the left?

Quick Quiz 40.4 Suppose classical physicists had the idea of plotting K_{\max} versus f as in Figure 40.11. Draw a graph of what the expected plot would look like, based on the wave model for light.

An incoming particle enters the scintillation crystal, where a collision results in a photon. The photon strikes the photocathode, which emits an electron by the photoelectric effect.

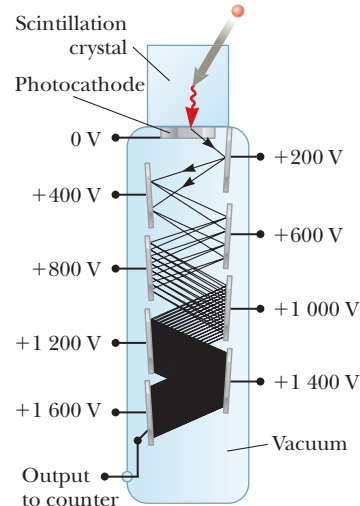


Figure 40.12 The multiplication of electrons in a photomultiplier tube.

Example 40.3 The Photoelectric Effect for Sodium

A sodium surface is illuminated with light having a wavelength of 300 nm. As indicated in Table 40.1, the work function for sodium metal is 2.46 eV.

(A) Find the maximum kinetic energy of the ejected photoelectrons.

SOLUTION

Conceptualize Imagine a photon striking the metal surface and ejecting an electron. The electron with the maximum energy is one near the surface that experiences no interactions with other particles in the metal that would reduce its energy on its way out of the metal.

continued

40.3 continued

Categorize We evaluate the results using equations developed in this section, so we categorize this example as a substitution problem.

Find the energy of each photon in the illuminating light beam from Equation 40.5:

$$E = hf = \frac{hc}{\lambda}$$

From Equation 40.11, find the maximum kinetic energy of an electron:

$$K_{\max} = \frac{hc}{\lambda} - \phi = \frac{1\,240\text{ eV}\cdot\text{nm}}{300\text{ nm}} - 2.46\text{ eV} = 1.67\text{ eV}$$

(B) Find the cutoff wavelength λ_c for sodium.

SOLUTION

Calculate λ_c using Equation 40.12:

$$\lambda_c = \frac{hc}{\phi} = \frac{1\,240\text{ eV}\cdot\text{nm}}{2.46\text{ eV}} = 504\text{ nm}$$



© Mary Evans Picture Library/Alamy

Arthur Holly Compton

American Physicist (1892–1962)

Compton was born in Wooster, Ohio, and attended Wooster College and Princeton University. He became the director of the laboratory at the University of Chicago, where experimental work concerned with sustained nuclear chain reactions was conducted. This work was of central importance to the construction of the first nuclear weapon. His discovery of the Compton effect led to his sharing of the 1927 Nobel Prize in Physics with Charles Wilson.

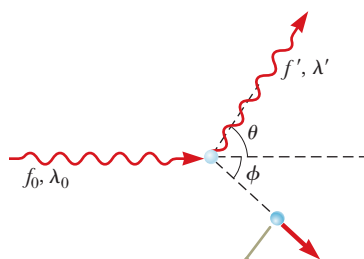
40.3 The Compton Effect

In 1919, Einstein concluded that a photon of energy E travels in a single direction and carries a momentum equal to $E/c = hf/c$. In 1923, Arthur Holly Compton (1892–1962) and Peter Debye (1884–1966) independently carried Einstein's idea of photon momentum further.

Prior to 1922, Compton and his coworkers had accumulated evidence showing that the classical wave theory of light failed to explain the scattering of x-rays from electrons. According to classical theory, electromagnetic waves of frequency f incident on electrons should have two effects: (1) radiation pressure (see Section 34.5) should cause the electrons to accelerate in the direction of propagation of the waves, and (2) the oscillating electric field of the incident radiation should set the electrons into oscillation at the apparent frequency f' , where f' is the frequency in the frame of the moving electrons. This apparent frequency is different from the frequency f of the incident radiation because of the Doppler effect (see Section 17.4). Each electron first absorbs radiation as a moving particle and then reradiates as a moving particle, thereby exhibiting two Doppler shifts in the frequency of radiation.

Because different electrons move at different speeds after the interaction, depending on the amount of energy absorbed from the electromagnetic waves, the scattered wave frequency at a given angle to the incoming radiation should show a distribution of Doppler-shifted values. Contrary to this prediction, Compton's experiments showed that at a given angle only *one* frequency of radiation is observed. Compton and his coworkers explained these experiments by treating photons not as waves but rather as point-like particles having energy hf and momentum hf/c and by assuming the energy and momentum of the isolated system of the colliding photon–electron pair are conserved. Compton adopted a particle model for something that was well known as a wave, and today this scattering phenomenon is known as the **Compton effect**. Figure 40.13 shows the quantum picture of the collision between an individual x-ray photon of frequency f_0 and an electron. In the quantum model, the electron is scattered through an angle ϕ with respect to this direction as in a billiard-ball type of collision. (The symbol ϕ used here is an angle and is not to be confused with the work function, which was discussed in the preceding section.) Compare Figure 40.13 with the two-dimensional collision shown in Figure 9.11.

Figure 40.14 is a schematic diagram of the apparatus used by Compton. The x-rays, scattered from a carbon target, were diffracted by a rotating crystal spectrometer, and the intensity was measured with an ionization chamber that generated a current proportional to the intensity. The incident beam consisted of monochromatic x-rays of wavelength $\lambda_0 = 0.071\text{ nm}$. The experimental intensity-



The electron recoils just as if struck by a classical particle, revealing the particle-like nature of the photon.

Figure 40.13 The quantum model for x-ray scattering from an electron.

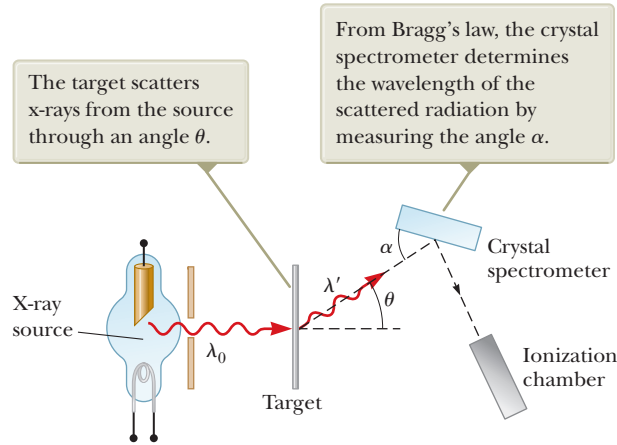


Figure 40.14 Schematic diagram of Compton's apparatus.

versus-wavelength plots observed by Compton for four scattering angles (corresponding to θ in Fig. 40.13) are shown in Figure 40.15. The graphs for the three nonzero angles show two peaks, one at λ_0 and one at $\lambda' > \lambda_0$. The shifted peak at λ' is caused by the scattering of x-rays from free electrons, which was predicted by Compton to depend on scattering angle as

$$\lambda' - \lambda_0 = \frac{h}{m_e c} (1 - \cos \theta) \quad (40.13)$$

◀ **Compton shift equation**

where m_e is the mass of the electron. This expression is known as the **Compton shift equation** and correctly describes the positions of the peaks in Figure 40.15. The factor $h/m_e c$, called the **Compton wavelength** of the electron, has a currently accepted value of

$$\lambda_C = \frac{h}{m_e c} = 0.00243 \text{ nm}$$

The unshifted peak at λ_0 in Figure 40.15 is caused by x-rays scattered from electrons tightly bound to the target atoms. This unshifted peak also is predicted by Equation 40.13 if the electron mass is replaced with the mass of a carbon atom, which is approximately 23 000 times the mass of the electron. Therefore, there is a wavelength shift for scattering from an electron bound to an atom, but it is so small that it was undetectable in Compton's experiment.

Compton's measurements were in excellent agreement with the predictions of Equation 40.13. These results were the first to convince many physicists of the fundamental validity of quantum theory.

Quick Quiz 40.5 For any given scattering angle θ , Equation 40.13 gives the same value for the Compton shift for any wavelength. Keeping that in mind, for which of the following types of radiation is the fractional shift in wavelength at a given scattering angle the largest? (a) radio waves (b) microwaves (c) visible light (d) x-rays

Derivation of the Compton Shift Equation

We can derive the Compton shift equation by assuming the photon behaves like a particle and collides elastically with a free electron initially at rest as shown in Figure 40.13. The photon is treated as a particle having energy $E = hf = hc/\lambda$ and zero rest energy. We apply the isolated system analysis models for energy and momentum to the photon and the electron. In the scattering process, the total energy and total linear momentum of the system are conserved. Applying the isolated system model for energy to this process gives

$$\Delta K_{\text{photon}} + \Delta K_e = 0 \rightarrow \frac{hc}{\lambda_0} = \frac{hc}{\lambda'} + K_e$$

◀ **Compton wavelength**

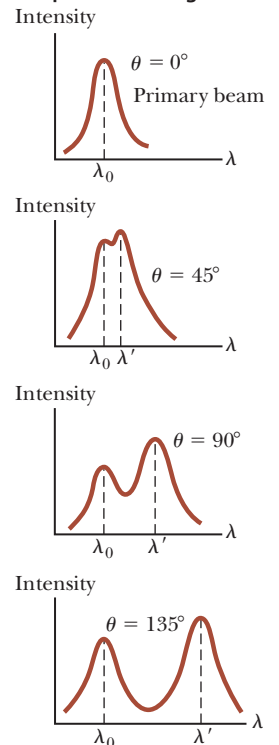


Figure 40.15 Scattered x-ray intensity versus wavelength for Compton scattering at $\theta = 0^\circ$, 45° , 90° , and 135° .

where hc/λ_0 is the energy of the incident photon, hc/λ' is the energy of the scattered photon, and K_e is the kinetic energy of the recoiling electron. Because the electron may recoil at a speed comparable to that of light, we must use the relativistic expression $K_e = (\gamma - 1)m_e c^2$ (Eq. 39.23). Therefore,

$$\frac{hc}{\lambda_0} = \frac{hc}{\lambda'} + (\gamma - 1)m_e c^2 \quad (40.14)$$

where $\gamma = 1/\sqrt{1 - (u^2/c^2)}$ and u is the speed of the electron.

Next, let's apply the isolated system model for momentum to this collision, noting that the x and y components of momentum are each conserved independently. Equation 39.28 shows that the momentum of a photon has a magnitude $p = E/c$, and we know from Equation 40.5 that $E = hf$. Therefore, $p = hf/c$. Substituting λf for c (Eq. 34.20) in this expression gives $p = h/\lambda$. Because the relativistic expression for the momentum of the recoiling electron is $p_e = \gamma m_e u$ (Eq. 39.19), we obtain the following expressions for the x and y components of linear momentum, where the angles are as described in Figure 40.13:

$$x \text{ component: } \frac{h}{\lambda_0} = \frac{h}{\lambda'} \cos \theta + \gamma m_e u \cos \phi \quad (40.15)$$

$$y \text{ component: } 0 = \frac{h}{\lambda'} \sin \theta - \gamma m_e u \sin \phi \quad (40.16)$$

Eliminating u and ϕ from Equations 40.14 through 40.16 gives a single expression that relates the remaining three variables (λ' , λ_0 , and θ). After some algebra (see Problem 64), we obtain Equation 40.13.

Example 40.4 Compton Scattering at 45°

X-rays of wavelength $\lambda_0 = 0.200\,000$ nm are scattered from a block of material. The scattered x-rays are observed at an angle of 45.0° to the incident beam. Calculate their wavelength.

SOLUTION

Conceptualize Imagine the process in Figure 40.13, with the photon scattered at 45° to its original direction.

Categorize We evaluate the result using an equation developed in this section, so we categorize this example as a substitution problem.

Solve Equation 40.13 for the wavelength of the scattered x-ray:

$$(1) \quad \lambda' = \lambda_0 + \frac{h(1 - \cos \theta)}{m_e c}$$

Substitute numerical values:

$$\begin{aligned} \lambda' &= 0.200\,000 \times 10^{-9} \text{ m} + \frac{(6.626 \times 10^{-34} \text{ J} \cdot \text{s})(1 - \cos 45.0^\circ)}{(9.11 \times 10^{-31} \text{ kg})(3.00 \times 10^8 \text{ m/s})} \\ &= 0.200\,000 \times 10^{-9} \text{ m} + 7.10 \times 10^{-13} \text{ m} = \mathbf{0.200\,710 \text{ nm}} \end{aligned}$$

WHAT IF? What if the detector is moved so that scattered x-rays are detected at an angle larger than 45° ? Does the wavelength of the scattered x-rays increase or decrease as the angle θ increases?

Answer In Equation (1), if the angle θ increases, $\cos \theta$ decreases. Consequently, the factor $(1 - \cos \theta)$ increases. Therefore, the scattered wavelength increases.

We could also apply an energy argument to achieve this same result. As the scattering angle increases, more energy is transferred from the incident photon to the electron. As a result, the energy of the scattered photon decreases with increasing scattering angle. Because $E = hf$, the frequency of the scattered photon decreases, and because $\lambda = c/f$, the wavelength increases.

40.4 The Nature of Electromagnetic Waves

In Section 35.1, we introduced the notion of competing models of light: particles and waves. Let's expand on that earlier discussion. Phenomena such as the photoelectric effect and the Compton effect offer ironclad evidence that when light (or other forms of electromagnetic radiation) and matter interact, the light behaves as if it were composed of particles having energy hf and momentum h/λ . How can light be considered a photon (in other words, a particle) when we know it is a wave? On the one hand, we describe light in terms of photons having energy and momentum. On the other hand, light and other electromagnetic waves exhibit interference and diffraction effects, which are consistent only with a wave interpretation.

Which model is correct? Is light a wave or a particle? The answer depends on the phenomenon being observed. Some experiments can be explained either better or solely with the photon model, whereas others are explained either better or solely with the wave model. We must accept both models and admit that the true nature of light is not describable in terms of any single classical picture. The same light beam that can eject photoelectrons from a metal (meaning that the beam consists of photons) can also be diffracted by a grating (meaning that the beam is a wave). In other words, the particle model and the wave model of light complement each other.

The success of the particle model of light in explaining the photoelectric effect and the Compton effect raises many other questions. If light is a particle, what is the meaning of the “frequency” and “wavelength” of the particle, and which of these two properties determines its energy and momentum? Is light *simultaneously* a wave and a particle? Although photons have no rest energy (a nonobservable quantity because a photon cannot be at rest), is there a simple expression for the *effective mass* of a moving photon? If photons have effective mass, do they experience gravitational attraction? What is the spatial extent of a photon, and how does an electron absorb or scatter one photon? Some of these questions can be answered, but others demand a view of atomic processes that is too pictorial and literal. Many of them stem from classical analogies such as colliding billiard balls and ocean waves breaking on a seashore. Quantum mechanics gives light a more flexible nature by treating the particle model and the wave model of light as both necessary and complementary. Neither model can be used exclusively to describe all properties of light. A complete understanding of the observed behavior of light can be attained only if the two models are combined in a complementary manner.

40.5 The Wave Properties of Particles

Students introduced to the dual nature of light often find the concept difficult to accept. In the world around us, we are accustomed to regarding such things as baseballs solely as particles and other things such as sound waves solely as forms of wave motion. Every large-scale observation can be interpreted by considering either a wave explanation or a particle explanation, but in the world of photons and electrons, such distinctions are not as sharply drawn.

Even more disconcerting is that, under certain conditions, the things we unambiguously call “particles” exhibit wave characteristics. In his 1923 doctoral dissertation, Louis de Broglie postulated that because photons have both wave and particle characteristics, perhaps all forms of matter have both properties. This highly revolutionary idea had no experimental confirmation at the time. According to de Broglie, electrons, just like light, have a dual particle–wave nature.

In Section 40.3, we found that the momentum of a photon can be expressed as

$$p = \frac{h}{\lambda}$$



SPL/Getty Images

Louis de Broglie

French Physicist (1892–1987)

De Broglie was born in Dieppe, France. At the Sorbonne in Paris, he studied history in preparation for what he hoped would be a career in the diplomatic service. The world of science is lucky he changed his career path to become a theoretical physicist. De Broglie was awarded the Nobel Prize in Physics in 1929 for his prediction of the wave nature of electrons.

This equation shows that the photon wavelength can be specified by its momentum: $\lambda = h/p$. De Broglie suggested that material particles of momentum p have a characteristic wavelength that is given by the *same expression*. Because the magnitude of the momentum of a particle of mass m and speed u is $p = mu$, the **de Broglie wavelength** of that particle is⁵

$$\lambda = \frac{h}{p} = \frac{h}{mu} \quad (40.17)$$

Furthermore, in analogy with photons, de Broglie postulated that particles obey the Einstein relation $E = hf$, where E is the total energy of the particle. The frequency of a particle is then

$$f = \frac{E}{h} \quad (40.18)$$

The dual nature of matter is apparent in Equations 40.17 and 40.18 because each contains both particle quantities (p and E) and wave quantities (λ and f).

The problem of understanding the dual nature of matter and radiation is conceptually difficult because the two models seem to contradict each other. This problem as it applies to light was discussed earlier. The **principle of complementarity** states that

the wave and particle models of either matter or radiation complement each other.

Neither model can be used exclusively to describe matter or radiation adequately. Because humans tend to generate mental images based on their experiences from the everyday world, we use both descriptions in a complementary manner to explain any given set of data from the quantum world.

The Davisson–Germer Experiment

De Broglie’s 1923 proposal that matter exhibits both wave and particle properties was regarded as pure speculation. If particles such as electrons had wave properties, under the correct conditions they should exhibit diffraction effects. Only three years later, C. J. Davisson (1881–1958) and L. H. Germer (1896–1971) succeeded in observing electron diffraction and measuring the wavelength of electrons. Their important discovery provided the first experimental confirmation of the waves proposed by de Broglie.

Interestingly, the intent of the initial Davisson–Germer experiment was not to confirm the de Broglie hypothesis. In fact, their discovery was made by accident (as is often the case). The experiment involved the scattering of low-energy electrons (approximately 54 eV) from a nickel target in a vacuum. During one experiment, the nickel surface was badly oxidized because of an accidental break in the vacuum system. After the target was heated in a flowing stream of hydrogen to remove the oxide coating, electrons scattered by it exhibited intensity maxima and minima at specific angles. The experimenters finally realized that the nickel had formed large crystalline regions upon heating and that the regularly spaced planes of atoms in these regions served as a diffraction grating for electrons. (See the discussion of diffraction of x-rays by crystals in Section 38.5.)

Shortly thereafter, Davisson and Germer performed more extensive diffraction measurements on electrons scattered from single-crystal targets. Their results showed conclusively the wave nature of electrons and confirmed the de Broglie relationship $p = h/\lambda$. In the same year, G. P. Thomson (1892–1975) of Scotland also observed electron diffraction patterns by passing electrons through very thin gold

Pitfall Prevention 40.3

What’s Waving? If particles have wave properties, what’s waving? You are familiar with waves on strings, which are very concrete. Sound waves are more abstract, but you are likely comfortable with them. Electromagnetic waves are even more abstract, but at least they can be described in terms of physical variables and electric and magnetic fields. In contrast, waves associated with particles are completely abstract and cannot be associated with a physical variable. In Chapter 41, we describe the wave associated with a particle in terms of probability.

⁵The de Broglie wavelength for a particle moving at any speed u is $\lambda = h/\gamma mu$, where $\gamma = [1 - (u^2/c^2)]^{-1/2}$.

foils. Diffraction patterns were subsequently observed in the scattering of helium atoms, hydrogen atoms, and neutrons. Hence, the wave nature of particles has been established in various ways.

- Quick Quiz 40.6** An electron and a proton both moving at nonrelativistic speeds have the same de Broglie wavelength. Which of the following quantities are also the same for the two particles? (a) speed (b) kinetic energy (c) momentum (d) frequency

Example 40.5 Wavelengths for Microscopic and Macroscopic Objects

(A) Calculate the de Broglie wavelength for an electron ($m_e = 9.11 \times 10^{-31}$ kg) moving at 1.00×10^7 m/s.

SOLUTION

Conceptualize Imagine the electron moving through space. From a classical viewpoint, it is a particle under constant velocity. From the quantum viewpoint, the electron has a wavelength associated with it.

Categorize We evaluate the result using an equation developed in this section, so we categorize this example as a substitution problem.

Evaluate the de Broglie wavelength using Equation 40.17:

$$\lambda = \frac{h}{m_e u} = \frac{6.626 \times 10^{-34} \text{ J} \cdot \text{s}}{(9.11 \times 10^{-31} \text{ kg})(1.00 \times 10^7 \text{ m/s})} = 7.27 \times 10^{-11} \text{ m}$$

The wave nature of this electron could be detected by diffraction techniques such as those in the Davisson–Germer experiment.

(B) A rock of mass 50 g is thrown with a speed of 40 m/s. What is its de Broglie wavelength?

SOLUTION

Evaluate the de Broglie wavelength using Equation 40.17:

$$\lambda = \frac{h}{mu} = \frac{6.626 \times 10^{-34} \text{ J} \cdot \text{s}}{(50 \times 10^{-3} \text{ kg})(40 \text{ m/s})} = 3.3 \times 10^{-34} \text{ m}$$

This wavelength is much smaller than any aperture through which the rock could possibly pass. Hence, we could not observe diffraction effects, and as a result, the wave properties of large-scale objects cannot be observed.

The Electron Microscope

A practical device that relies on the wave characteristics of electrons is the **electron microscope**. A *transmission* electron microscope, used for viewing flat, thin samples, is shown in Figure 40.16 on page 1252. In many respects, it is similar to an optical microscope; the electron microscope, however, has a much greater resolving power because it can accelerate electrons to very high kinetic energies, giving them very short wavelengths. No microscope can resolve details that are significantly smaller than the wavelength of the waves used to illuminate the object. The shorter wavelengths of electrons gives an electron microscope a resolution that can be 1 000 times better than that from the visible light used in optical microscopes. As a result, an electron microscope with ideal lenses would be able to distinguish details approximately 1 000 times smaller than those distinguished by an optical microscope. (Electromagnetic radiation of the same wavelength as the electrons in an electron microscope is in the x-ray region of the spectrum.)

The electron beam in an electron microscope is controlled by electrostatic or magnetic deflection, which acts on the electrons to focus the beam and form an image. Rather than examining the image through an eyepiece as in an optical microscope, the viewer looks at an image formed on a monitor or other type of

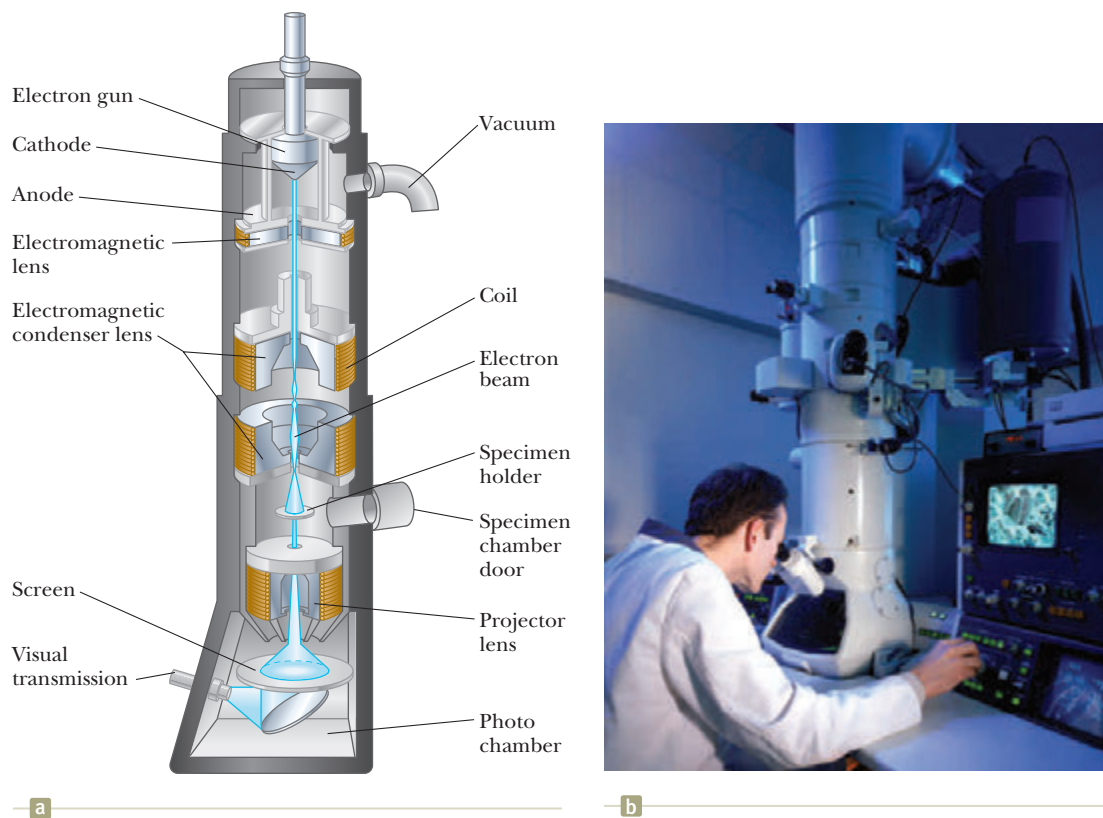


Figure 40.16 (a) Diagram of a transmission electron microscope for viewing a thinly sectioned sample. The “lenses” that control the electron beam are magnetic deflection coils. (b) An electron microscope in use.



© Robert Harding Picture Library Ltd./Alamy

Figure 40.17 A scanning electron microscope photograph shows significant detail of a cheese mite, *Tyrolichus casei*. The mite is so small, with a maximum length of 0.70 mm, that ordinary microscopes do not reveal minute anatomical details.

display screen. Figure 40.17 shows the amazing detail available with an electron microscope.

40.6 A New Model: The Quantum Particle

Because in the past we considered the particle and wave models to be distinct, the discussions presented in previous sections may be quite disturbing. The notion that both light and material particles have both particle and wave properties does not fit with this distinction. Experimental evidence shows, however, that this conclusion is exactly what we must accept. The recognition of this dual nature leads to a new model, the **quantum particle**, which is a combination of the particle model introduced in Chapter 2 and the wave model discussed in Chapter 16. In this new model, entities have both particle and wave characteristics, and we must choose one appropriate behavior—particle or wave—to understand a particular phenomenon.

In this section, we shall explore this model in a way that might make you more comfortable with this idea. We shall do so by demonstrating that an entity that exhibits properties of a particle can be constructed from waves.

Let’s first recall some characteristics of ideal particles and ideal waves. An ideal particle has zero size. Therefore, an essential feature of a particle is that it is *localized* in space. An ideal wave has a single frequency and is infinitely long as suggested by Figure 40.18a. Therefore, an ideal wave is *unlocalized* in space. A localized entity can be built from infinitely long waves as follows. Imagine drawing one wave along the x axis, with one of its crests located at $x = 0$, as at the top of Figure 40.18b. Now draw a second wave, of the same amplitude but a different frequency, with one of its

crests also at $x = 0$. As a result of the superposition of these two waves, *beats* exist as the waves are alternately in phase and out of phase. (Beats were discussed in Section 18.7.) The bottom curve in Figure 40.18b shows the results of superposing these two waves.

Notice that we have already introduced some localization by superposing the two waves. A single wave has the same amplitude everywhere in space; no point in space is any different from any other point. By adding a second wave, however, there is something different about the in-phase points compared with the out-of-phase points.

Now imagine that more and more waves are added to our original two, each new wave having a new frequency. Each new wave is added so that one of its crests is at $x = 0$ with the result that all the waves add constructively at $x = 0$. When we add a large number of waves, the probability of a positive value of a wave function at any point $x \neq 0$ is equal to the probability of a negative value, and there is destructive interference *everywhere* except near $x = 0$, where all the crests are superposed. The result is shown in Figure 40.19. The small region of constructive interference is called a **wave packet**. This localized region of space is different from all other regions. We can identify the wave packet as a particle because it has the localized nature of a particle! The location of the wave packet corresponds to the particle's position.

The localized nature of this entity is the *only* characteristic of a particle that was generated with this process. We have not addressed how the wave packet might achieve such particle characteristics as mass, electric charge, and spin. Therefore, you may not be completely convinced that we have built a particle. As further evidence that the wave packet can represent the particle, let's show that the wave packet has another characteristic of a particle.

To simplify the mathematical representation, we return to our combination of two waves. Consider two waves with equal amplitudes but different angular frequencies ω_1 and ω_2 . We can represent the waves mathematically as

$$y_1 = A \cos(k_1x - \omega_1t) \quad \text{and} \quad y_2 = A \cos(k_2x - \omega_2t)$$

where, as in Chapter 16, $k = 2\pi/\lambda$ and $\omega = 2\pi f$. Using the superposition principle, let's add the waves:

$$y = y_1 + y_2 = A \cos(k_1x - \omega_1t) + A \cos(k_2x - \omega_2t)$$

It is convenient to write this expression in a form that uses the trigonometric identity

$$\cos a + \cos b = 2 \cos\left(\frac{a-b}{2}\right) \cos\left(\frac{a+b}{2}\right)$$

Letting $a = k_1x - \omega_1t$ and $b = k_2x - \omega_2t$ gives

$$y = 2A \cos\left[\frac{(k_1x - \omega_1t) - (k_2x - \omega_2t)}{2}\right] \cos\left[\frac{(k_1x - \omega_1t) + (k_2x - \omega_2t)}{2}\right]$$

$$y = \left[2A \cos\left(\frac{\Delta k}{2}x - \frac{\Delta\omega}{2}t\right)\right] \cos\left(\frac{k_1 + k_2}{2}x - \frac{\omega_1 + \omega_2}{2}t\right) \quad (40.19)$$

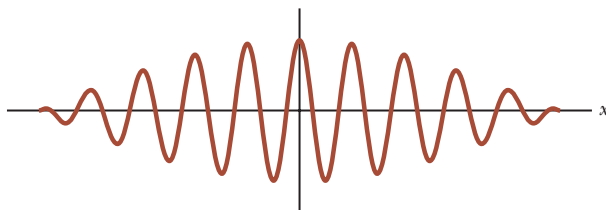


Figure 40.19 If a large number of waves are combined, the result is a wave packet, which represents a particle.

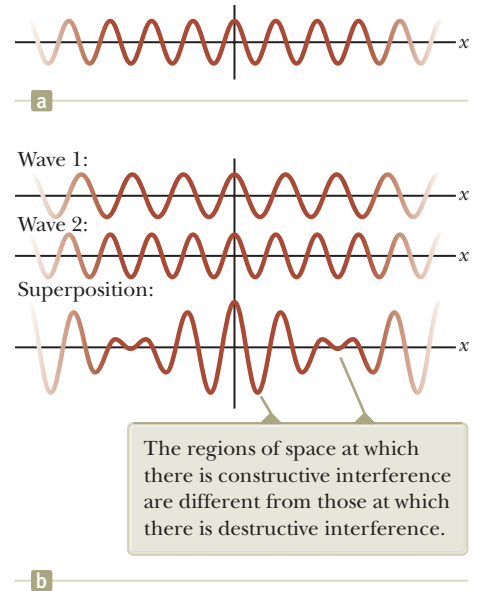
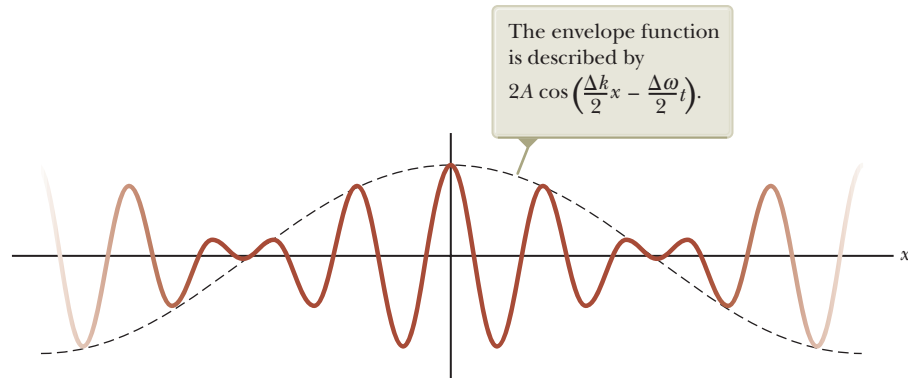


Figure 40.18 (a) An idealized wave of an exact single frequency is the same throughout space and time. (b) If two ideal waves with slightly different frequencies are combined, beats result (Section 18.7).

Figure 40.20 The beat pattern of Figure 40.18b, with an envelope function (dashed curve) superimposed.



where $\Delta k = k_1 - k_2$ and $\Delta\omega = \omega_1 - \omega_2$. The second cosine factor represents a wave with a wave number and frequency that are equal to the averages of the values for the individual waves.

In Equation 40.19, the factor in square brackets represents the envelope of the wave as shown by the dashed curve in Figure 40.20. This factor also has the mathematical form of a wave. This envelope of the combination can travel through space with a different speed than the individual waves. As an extreme example of this possibility, imagine combining two identical waves moving in opposite directions. The two waves move with the same speed, but the envelope has a speed of *zero* because we have built a standing wave, which we studied in Section 18.2.

For an individual wave, the speed is given by Equation 16.11,

Phase speed of a wave
in a wave packet

$$v_{\text{phase}} = \frac{\omega}{k} \quad (40.20)$$

This speed is called the **phase speed** because it is the rate of advance of a crest on a single wave, which is a point of fixed phase. Equation 40.20 can be interpreted as follows: the phase speed of a wave is the ratio of the coefficient of the time variable t to the coefficient of the space variable x in the equation representing the wave, $y = A \cos(kx - \omega t)$.

The factor in brackets in Equation 40.19 is of the form of a wave, so it moves with a speed given by this same ratio:

$$v_g = \frac{\text{coefficient of time variable } t}{\text{coefficient of space variable } x} = \frac{(\Delta\omega/2)}{(\Delta k/2)} = \frac{\Delta\omega}{\Delta k}$$

The subscript g on the speed indicates that it is commonly called the **group speed**, or the speed of the wave packet (the *group* of waves) we have built. We have generated this expression for a simple addition of two waves. When a large number of waves are superposed to form a wave packet, this ratio becomes a derivative:

Group speed of a wave packet

$$v_g = \frac{d\omega}{dk} \quad (40.21)$$

Multiplying the numerator and the denominator by \hbar , where $\hbar = h/2\pi$, gives

$$v_g = \frac{\hbar d\omega}{\hbar dk} = \frac{d(\hbar\omega)}{d(\hbar k)} \quad (40.22)$$

Let's look at the terms in the parentheses of Equation 40.22 separately. For the numerator,

$$\hbar\omega = \frac{h}{2\pi}(2\pi f) = hf = E$$

For the denominator,

$$\hbar k = \frac{h}{2\pi}\left(\frac{2\pi}{\lambda}\right) = \frac{h}{\lambda} = p$$

Therefore, Equation 40.22 can be written as

$$v_g = \frac{d(\hbar\omega)}{d(\hbar k)} = \frac{dE}{dp} \quad (40.23)$$

Because we are exploring the possibility that the envelope of the combined waves represents the particle, consider a free particle moving with a speed u that is small compared with the speed of light. The energy of the particle is its kinetic energy:

$$E = \frac{1}{2}mu^2 = \frac{p^2}{2m}$$

Differentiating this equation with respect to p gives

$$v_g = \frac{dE}{dp} = \frac{d}{dp} \left(\frac{p^2}{2m} \right) = \frac{1}{2m} (2p) = u \quad (40.24)$$

Therefore, the group speed of the wave packet is identical to the speed of the particle that it is modeled to represent, giving us further confidence that the wave packet is a reasonable way to build a particle.

Quick Quiz 40.7 As an analogy to wave packets, consider an “automobile packet” that occurs near the scene of an accident on a freeway. The phase speed is analogous to the speed of individual automobiles as they move through the backup caused by the accident. The group speed can be identified as the speed of the leading edge of the packet of cars. For the automobile packet, is the group speed (a) the same as the phase speed, (b) less than the phase speed, or (c) greater than the phase speed?

40.7 The Double-Slit Experiment Revisited

Wave-particle duality is now a firmly accepted concept reinforced by experimental results, including those of the Davisson-Germer experiment. As with the postulates of special relativity, however, this concept often leads to clashes with familiar thought patterns we hold from everyday experience.

One way to crystallize our ideas about the electron’s wave-particle duality is through an experiment in which electrons are fired at a double slit. Consider a parallel beam of mono-energetic electrons incident on a double slit as in Figure 40.21. Let’s assume the slit widths are small compared with the electron wavelength so that we need not worry about diffraction maxima and minima as discussed for light in Section 38.2. An electron detector screen is positioned far from the slits at a distance much greater than d , the separation distance of the slits. If the detector screen collects electrons for a long enough time, we find a typical wave interference pattern for the counts per minute, or probability of arrival of electrons. Such an interference

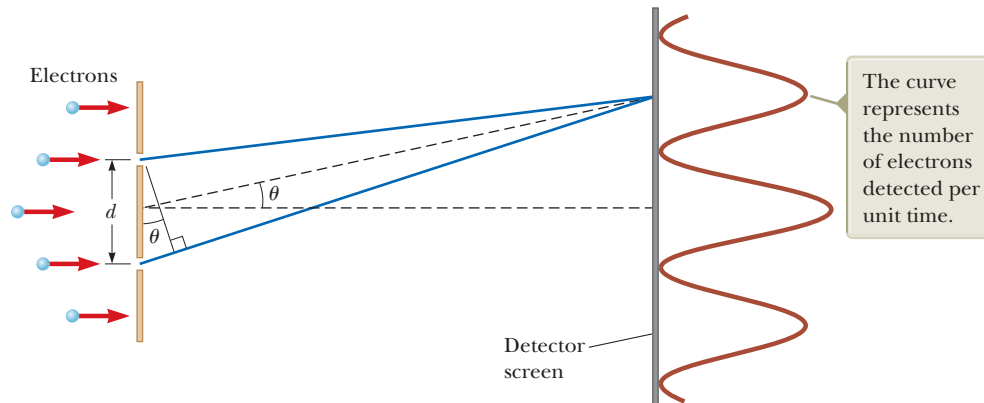


Figure 40.21 Electron interference. The slit separation d is much greater than the individual slit widths and much less than the distance between the slit and the detector screen.

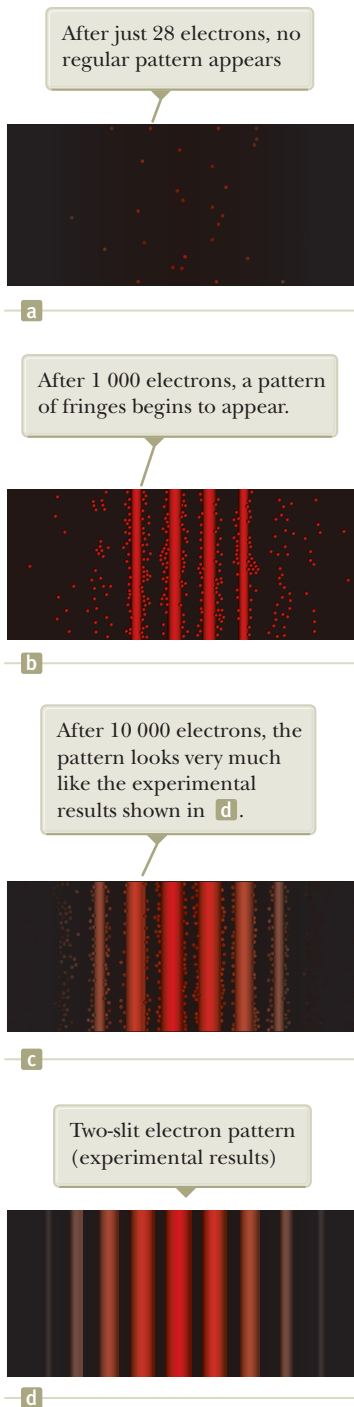


Figure 40.22 (a)–(c) Computer-simulated interference patterns for a small number of electrons incident on a double slit. (d) Computer simulation of a double-slit interference pattern produced by many electrons.

pattern would not be expected if the electrons behaved as classical particles, giving clear evidence that electrons are interfering, a distinct wave-like behavior.

If we measure the angles θ at which the maximum intensity of electrons arrives at the detector screen in Figure 40.21, we find they are described by exactly the same equation as that for light, $d \sin \theta = m\lambda$ (Eq. 37.2), where m is the order number and λ is the electron wavelength. Therefore, the dual nature of the electron is clearly shown in this experiment: the electrons are detected as particles at a localized spot on the detector screen at some instant of time, but the probability of arrival at that spot is determined by finding the intensity of two interfering waves.

Now imagine that we lower the beam intensity so that one electron at a time arrives at the double slit. It is tempting to assume the electron goes through either slit 1 or slit 2. You might argue that there are no interference effects because there is not a second electron going through the other slit to interfere with the first. This assumption places too much emphasis on the particle model of the electron, however. The interference pattern is still observed if the time interval for the measurement is sufficiently long for many electrons to pass one at a time through the slits and arrive at the detector screen! This situation is illustrated by the computer-simulated patterns in Figure 40.22 where the interference pattern becomes clearer as the number of electrons reaching the detector screen increases. Hence, our assumption that the electron is localized and goes through only one slit when both slits are open must be wrong (a painful conclusion!).

To interpret these results, we are forced to conclude that an electron interacts with both slits *simultaneously*. If you try to determine experimentally which slit the electron goes through, the act of measuring destroys the interference pattern. It is impossible to determine which slit the electron goes through. In effect, we can say only that the electron passes through *both* slits! The same arguments apply to photons.

If we restrict ourselves to a pure particle model, it is an uncomfortable notion that the electron can be present at both slits at once. From the quantum particle model, however, the particle can be considered to be built from waves that exist throughout space. Therefore, the wave components of the electron are present at both slits at the same time, and this model leads to a more comfortable interpretation of this experiment.

40.8 The Uncertainty Principle

Whenever one measures the position or velocity of a particle at any instant, experimental uncertainties are built into the measurements. According to classical mechanics, there is no fundamental barrier to an ultimate refinement of the apparatus or experimental procedures. In other words, it is possible, in principle, to make such measurements with arbitrarily small uncertainty. Quantum theory predicts, however, that it is fundamentally impossible to make simultaneous measurements of a particle's position and momentum with infinite accuracy.

In 1927, Werner Heisenberg (1901–1976) introduced this notion, which is now known as the **Heisenberg uncertainty principle**:

If a measurement of the position of a particle is made with uncertainty Δx and a simultaneous measurement of its x component of momentum is made with uncertainty Δp_x , the product of the two uncertainties can never be smaller than $\hbar/2$:

$$\Delta x \Delta p_x \geq \frac{\hbar}{2} \quad (40.25)$$

That is, it is physically impossible to measure simultaneously the exact position and exact momentum of a particle. Heisenberg was careful to point out that the inescapable uncertainties Δx and Δp_x do not arise from imperfections in practical measuring instruments. Rather, the uncertainties arise from the quantum structure of matter.

To understand the uncertainty principle, imagine that a particle has a single wavelength that is known *exactly*. According to the de Broglie relation, $\lambda = h/p$, we would therefore know the momentum to be precisely $p = h/\lambda$. In reality, a single-wavelength wave would exist throughout space. Any region along this wave is the same as any other region (Fig. 40.18a). Suppose we ask, Where is the particle this wave represents? No special location in space along the wave could be identified with the particle; all points along the wave are the same. Therefore, we have *infinite* uncertainty in the position of the particle, and we know nothing about its location. Perfect knowledge of the particle's momentum has cost us all information about its location.

In comparison, now consider a particle whose momentum is uncertain so that it has a range of possible values of momentum. According to the de Broglie relation, the result is a range of wavelengths. Therefore, the particle is not represented by a single wavelength, but rather by a combination of wavelengths within this range. This combination forms a wave packet as we discussed in Section 40.6 and illustrated in Figure 40.19. If you were asked to determine the location of the particle, you could only say that it is somewhere in the region defined by the wave packet because there is a distinct difference between this region and the rest of space. Therefore, by losing some information about the momentum of the particle, we have gained information about its position.

If you were to lose *all* information about the momentum, you would be adding together waves of all possible wavelengths, resulting in a wave packet of zero length. Therefore, if you know nothing about the momentum, you know exactly where the particle is.

The mathematical form of the uncertainty principle states that the product of the uncertainties in position and momentum is always larger than some minimum value. This value can be calculated from the types of arguments discussed above, and the result is the value of $\hbar/2$ in Equation 40.25.

Another form of the uncertainty principle can be generated by reconsidering Figure 40.19. Imagine that the horizontal axis is time rather than spatial position x . We can then make the same arguments that were made about knowledge of wavelength and position in the time domain. The corresponding variables would be frequency and time. Because frequency is related to the energy of the particle by $E = hf$, the uncertainty principle in this form is

$$\Delta E \Delta t \geq \frac{\hbar}{2} \quad (40.26)$$

The form of the uncertainty principle given in Equation 40.26 suggests that energy conservation can appear to be violated by an amount ΔE as long as it is only for a short time interval Δt consistent with that equation. We shall use this notion to estimate the rest energies of particles in Chapter 46.

- Quick Quiz 40.8** A particle's location is measured and specified as being exactly at $x = 0$, with *zero* uncertainty in the x direction. How does that location affect the uncertainty of its velocity component in the y direction? (a) It does not affect it. (b) It makes it infinite. (c) It makes it zero.

Example 40.6 Locating an Electron

The speed of an electron is measured to be 5.00×10^3 m/s to an accuracy of 0.003 00%. Find the minimum uncertainty in determining the position of this electron.

SOLUTION

Conceptualize The fractional value given for the accuracy of the electron's speed can be interpreted as the fractional uncertainty in its momentum. This uncertainty corresponds to a minimum uncertainty in the electron's position

continued



Werner Heisenberg
German Theoretical Physicist
(1901–1976)

Heisenberg obtained his Ph.D. in 1923 at the University of Munich. While other physicists tried to develop physical models of quantum phenomena, Heisenberg developed an abstract mathematical model called *matrix mechanics*. The more widely accepted physical models were shown to be equivalent to matrix mechanics. Heisenberg made many other significant contributions to physics, including his famous uncertainty principle for which he received a Nobel Prize in Physics in 1932, the prediction of two forms of molecular hydrogen, and theoretical models of the nucleus.

Pitfall Prevention 40.4

The Uncertainty Principle Some students incorrectly interpret the uncertainty principle as meaning that a measurement interferes with the system. For example, if an electron is observed in a hypothetical experiment using an optical microscope, the photon used to see the electron collides with it and makes it move, giving it an uncertainty in momentum. This scenario does *not* represent the basis of the uncertainty principle. The uncertainty principle is independent of the measurement process and is based on the wave nature of matter.

40.6 continued

Categorize We evaluate the result using concepts developed in this section, so we categorize this example as a substitution problem.

Assume the electron is moving along the x axis and find the uncertainty in p_x , letting f represent the accuracy of the measurement of its speed:

$$\Delta p_x = m \Delta v_x = m f v_x$$

Solve Equation 40.25 for the uncertainty in the electron's position and substitute numerical values:

$$\begin{aligned} \Delta x &\geq \frac{\hbar}{2 \Delta p_x} = \frac{\hbar}{2 m f v_x} = \frac{1.055 \times 10^{-34} \text{ J} \cdot \text{s}}{2(9.11 \times 10^{-31} \text{ kg})(0.000\,030\,0)(5.00 \times 10^3 \text{ m/s})} \\ &= 3.86 \times 10^{-4} \text{ m} = \mathbf{0.386 \text{ mm}} \end{aligned}$$

Example 40.7 The Line Width of Atomic Emissions

Atoms have quantized energy levels similar to those of Planck's oscillators, although the energy levels of an atom are usually not evenly spaced. When an atom makes a transition between states separated in energy by ΔE , energy is emitted in the form of a photon of frequency $f = \Delta E/h$. Although an excited atom can radiate at any time from $t = 0$ to $t = \infty$, the average time interval after excitation during which an atom radiates is called the **lifetime** τ . If $\tau = 1.0 \times 10^{-8}$ s, use the uncertainty principle to compute the line width Δf produced by this finite lifetime.

SOLUTION

Conceptualize The lifetime τ given for the excited state can be interpreted as the uncertainty Δt in the time at which the transition occurs. This uncertainty corresponds to a minimum uncertainty in the frequency of the radiated photon through the uncertainty principle.

Categorize We evaluate the result using concepts developed in this section, so we categorize this example as a substitution problem.

Use Equation 40.5 to relate the uncertainty in the photon's frequency to the uncertainty in its energy:

$$E = hf \rightarrow \Delta E = h \Delta f \rightarrow \Delta f = \frac{\Delta E}{h}$$

Use Equation 40.26 to substitute for the uncertainty in the photon's energy, giving the minimum value of Δf :

$$\Delta f \geq \frac{1}{h} \frac{\hbar}{2 \Delta t} = \frac{1}{h} \frac{h/2\pi}{2 \Delta t} = \frac{1}{4\pi \Delta t} = \frac{1}{4\pi \tau}$$

Substitute for the lifetime of the excited state:

$$\Delta f \geq \frac{1}{4\pi(1.0 \times 10^{-8} \text{ s})} = \mathbf{8.0 \times 10^6 \text{ Hz}}$$

WHAT IF? What if this same lifetime were associated with a transition that emits a radio wave rather than a visible light wave from an atom? Is the fractional line width $\Delta f/f$ larger or smaller than for the visible light?

Answer Because we are assuming the same lifetime for both transitions, Δf is independent of the frequency of radiation. Radio waves have lower frequencies than light waves, so the ratio $\Delta f/f$ will be larger for the radio waves. Assuming a light-wave frequency f of 6.00×10^{14} Hz, the fractional line width is

$$\frac{\Delta f}{f} = \frac{8.0 \times 10^6 \text{ Hz}}{6.00 \times 10^{14} \text{ Hz}} = 1.3 \times 10^{-8}$$

This narrow fractional line width can be measured with a sensitive interferometer. Usually, however, temperature and pressure effects overshadow the natural line width and broaden the line through mechanisms associated with the Doppler effect and collisions.

Assuming a radio-wave frequency f of 94.7×10^6 Hz, the fractional line width is

$$\frac{\Delta f}{f} = \frac{8.0 \times 10^6 \text{ Hz}}{94.7 \times 10^6 \text{ Hz}} = 8.4 \times 10^{-2}$$

Therefore, for the radio wave, this same absolute line width corresponds to a fractional line width of more than 8%.

Summary

Concepts and Principles

The characteristics of **blackbody radiation** cannot be explained using classical concepts. Planck introduced the quantum concept and Planck's constant h when he assumed atomic oscillators existing only in discrete energy states were responsible for this radiation. In Planck's model, radiation is emitted in single quantized packets whenever an oscillator makes a transition between discrete energy states. The energy of a packet is

$$E = hf \quad (40.5)$$

where f is the frequency of the oscillator. Einstein successfully extended Planck's quantum hypothesis to the standing waves of electromagnetic radiation in a cavity used in the blackbody radiation model.

Light has a dual nature in that it has both wave and particle characteristics. Some experiments can be explained either better or solely by the particle model, whereas others can be explained either better or solely by the wave model.

By combining a large number of waves, a single region of constructive interference, called a **wave packet**, can be created. The wave packet carries the characteristic of localization like a particle does, but it has wave properties because it is built from waves. For an individual wave in the wave packet, the **phase speed** is

$$v_{\text{phase}} = \frac{\omega}{k} \quad (40.20)$$

For the wave packet as a whole, the **group speed** is

$$v_g = \frac{d\omega}{dk} \quad (40.21)$$

For a wave packet representing a particle, the group speed can be shown to be the same as the speed of the particle.

The **photoelectric effect** is a process whereby electrons are ejected from a metal surface when light is incident on that surface. In Einstein's model, light is viewed as a stream of particles, or **photons**, each having energy $E = hf$, where h is Planck's constant and f is the frequency. The maximum kinetic energy of the ejected photoelectron is

$$K_{\text{max}} = hf - \phi \quad (40.11)$$

where ϕ is the **work function** of the metal.

X-rays are scattered at various angles by electrons in a target. In such a scattering event, a shift in wavelength is observed for the scattered x-rays, a phenomenon known as the **Compton effect**. Classical physics does not predict the correct behavior in this effect. If the x-ray is treated as a photon, conservation of energy and linear momentum applied to the photon–electron collisions yields, for the Compton shift,

$$\lambda' - \lambda_0 = \frac{h}{m_e c} (1 - \cos \theta) \quad (40.13)$$

where m_e is the mass of the electron, c is the speed of light, and θ is the scattering angle.

Every object of mass m and momentum $p = mu$ has wave properties, with a **de Broglie wavelength** given by

$$\lambda = \frac{h}{p} = \frac{h}{mu} \quad (40.17)$$

The **Heisenberg uncertainty principle** states that if a measurement of the position of a particle is made with uncertainty Δx and a simultaneous measurement of its linear momentum is made with uncertainty Δp_x , the product of the two uncertainties is restricted to

$$\Delta x \Delta p_x \geq \frac{\hbar}{2} \quad (40.25)$$

Another form of the uncertainty principle relates measurements of energy and time:

$$\Delta E \Delta t \geq \frac{\hbar}{2} \quad (40.26)$$

Objective Questions

1. denotes answer available in *Student Solutions Manual/Study Guide*

1. Rank the wavelengths of the following quantum particles from the largest to the smallest. If any have equal

wavelengths, display the equality in your ranking. (a) a photon with energy 3 eV (b) an electron with

- kinetic energy 3 eV (c) a proton with kinetic energy 3 eV (d) a photon with energy 0.3 eV (e) an electron with momentum $3 \text{ eV}/c$
- An x-ray photon is scattered by an originally stationary electron. Relative to the frequency of the incident photon, is the frequency of the scattered photon (a) lower, (b) higher, or (c) unchanged?
 - In a Compton scattering experiment, a photon of energy E is scattered from an electron at rest. After the scattering event occurs, which of the following statements is true? (a) The frequency of the photon is greater than E/h . (b) The energy of the photon is less than E . (c) The wavelength of the photon is less than hc/E . (d) The momentum of the photon increases. (e) None of those statements is true.
 - In a certain experiment, a filament in an evacuated lightbulb carries a current I_1 and you measure the spectrum of light emitted by the filament, which behaves as a black body at temperature T_1 . The wavelength emitted with highest intensity (symbolized by λ_{max}) has the value λ_1 . You then increase the potential difference across the filament by a factor of 8, and the current increases by a factor of 2. (i) After this change, what is the new value of the temperature of the filament? (a) $16T_1$ (b) $8T_1$ (c) $4T_1$ (d) $2T_1$ (e) still T_1 (ii) What is the new value of the wavelength emitted with highest intensity? (a) $4\lambda_1$ (b) $2\lambda_1$ (c) λ_1 (d) $\frac{1}{2}\lambda_1$ (e) $\frac{1}{4}\lambda_1$
 - Which of the following statements are true according to the uncertainty principle? More than one statement may be correct. (a) It is impossible to simultaneously determine both the position and the momentum of a particle along the same axis with arbitrary accuracy. (b) It is impossible to simultaneously determine both the energy and momentum of a particle with arbitrary accuracy. (c) It is impossible to determine a particle's energy with arbitrary accuracy in a finite amount of time. (d) It is impossible to measure the position of a particle with arbitrary accuracy in a finite amount of time. (e) It is impossible to simultaneously measure both the energy and position of a particle with arbitrary accuracy.
 - A monochromatic light beam is incident on a barium target that has a work function of 2.50 eV. If a potential difference of 1.00 V is required to turn back all the ejected electrons, what is the wavelength of the light beam? (a) 355 nm (b) 497 nm (c) 744 nm (d) 1.42 μm (e) none of those answers
 - Which of the following is most likely to cause sunburn by delivering more energy to individual molecules in skin cells? (a) infrared light (b) visible light (c) ultraviolet light (d) microwaves (e) Choices (a) through (d) are equally likely.
 - Which of the following phenomena most clearly demonstrates the wave nature of electrons? (a) the photoelectric effect (b) blackbody radiation (c) the Compton effect (d) diffraction of electrons by crystals (e) none of those answers
 - What is the de Broglie wavelength of an electron accelerated from rest through a potential difference of 50.0 V? (a) 0.100 nm (b) 0.139 nm (c) 0.174 nm (d) 0.834 nm (e) none of those answers
 - A proton, an electron, and a helium nucleus all move at speed v . Rank their de Broglie wavelengths from largest to smallest.
 - Consider (a) an electron, (b) a photon, and (c) a proton, all moving in vacuum. Choose all correct answers for each question. (i) Which of the three possess rest energy? (ii) Which have charge? (iii) Which carry energy? (iv) Which carry momentum? (v) Which move at the speed of light? (vi) Which have a wavelength characterizing their motion?
 - An electron and a proton, moving in opposite directions, are accelerated from rest through the same potential difference. Which particle has the longer wavelength? (a) The electron does. (b) The proton does. (c) Both are the same. (d) Neither has a wavelength.
 - Which of the following phenomena most clearly demonstrates the particle nature of light? (a) diffraction (b) the photoelectric effect (c) polarization (d) interference (e) refraction
 - Both an electron and a proton are accelerated to the same speed, and the experimental uncertainty in the speed is the same for the two particles. The positions of the two particles are also measured. Is the minimum possible uncertainty in the electron's position (a) less than the minimum possible uncertainty in the proton's position, (b) the same as that for the proton, (c) more than that for the proton, or (d) impossible to tell from the given information?

Conceptual Questions

I. denotes answer available in *Student Solutions Manual/Study Guide*

- The opening photograph for this chapter shows a filament of a lightbulb in operation. Look carefully at the last turns of wire at the upper and lower ends of the filament. Why are these turns dimmer than the others?
- How does the Compton effect differ from the photoelectric effect?
- If matter has a wave nature, why is this wave-like characteristic not observable in our daily experiences?
- If the photoelectric effect is observed for one metal, can you conclude that the effect will also be observed for another metal under the same conditions? Explain.
- In the photoelectric effect, explain why the stopping potential depends on the frequency of light but not on the intensity.
- Why does the existence of a cutoff frequency in the photoelectric effect favor a particle theory for light over a wave theory?
- Which has more energy, a photon of ultraviolet radiation or a photon of yellow light? Explain.

8. All objects radiate energy. Why, then, are we not able to see all objects in a dark room?
9. Is an electron a wave or a particle? Support your answer by citing some experimental results.
10. Suppose a photograph were made of a person's face using only a few photons. Would the result be simply a very faint image of the face? Explain your answer.
11. Why is an electron microscope more suitable than an optical microscope for "seeing" objects less than $1\ \mu\text{m}$ in size?
12. Is light a wave or a particle? Support your answer by citing specific experimental evidence.
13. (a) What does the slope of the lines in Figure 40.11 represent? (b) What does the y intercept represent? (c) How would such graphs for different metals compare with one another?
14. Why was the demonstration of electron diffraction by Davisson and Germer an important experiment?
15. *Iridescence* is the phenomenon that gives shining colors to the feathers of peacocks, hummingbirds (see page 1134), resplendent quetzals, and even ducks and grackles. Without pigments, it colors Morpho butterflies (Fig. CQ40.15), *Urania* moths, some beetles and flies, rainbow trout, and mother-of-pearl in abalone shells. Iridescent colors change as you turn an object. They are produced by a wide variety of intricate structures in different species. Problem 64 in Chapter 38 describes the structures that produce iridescence in a peacock feather. These structures were all unknown until the

invention of the electron microscope. Explain why light microscopes cannot reveal them.



Figure CQ40.15

16. In describing the passage of electrons through a slit and arriving at a screen, physicist Richard Feynman said that "electrons arrive in lumps, like particles, but the probability of arrival of these lumps is determined as the intensity of the waves would be. It is in this sense that the electron behaves sometimes like a particle and sometimes like a wave." Elaborate on this point in your own words. For further discussion, see R. Feynman, *The Character of Physical Law* (Cambridge, MA: MIT Press, 1980), chap. 6.
17. The classical model of blackbody radiation given by the Rayleigh–Jeans law has two major flaws. (a) Identify the flaws and (b) explain how Planck's law deals with them.

Problems

ENHANCED

WebAssign

The problems found in this chapter may be assigned online in Enhanced WebAssign

1. straightforward; 2. intermediate;
3. challenging

1. full solution available in the *Student Solutions Manual/Study Guide*

AMT

Analysis Model tutorial available in Enhanced WebAssign

GP

Guided Problem

M

Master It tutorial available in Enhanced WebAssign

W

Watch It video solution available in Enhanced WebAssign

Section 40.1 Blackbody Radiation and Planck's Hypothesis

1. The temperature of an electric heating element is 150°C . At what wavelength does the radiation emitted from the heating element reach its peak?
2. Model the tungsten filament of a lightbulb as a black body at temperature $2900\ \text{K}$. (a) Determine the wavelength of light it emits most strongly. (b) Explain why the answer to part (a) suggests that more energy from the lightbulb goes into infrared radiation than into visible light.
3. Lightning produces a maximum air temperature on the order of $10^4\ \text{K}$, whereas a nuclear explosion produces a temperature on the order of $10^7\ \text{K}$. (a) Use Wien's displacement law to find the order of magnitude of the wavelength of the thermally produced

photons radiated with greatest intensity by each of these sources. (b) Name the part of the electromagnetic spectrum where you would expect each to radiate most strongly.

4. Figure P40.4 shows the spectrum of light emitted by a firefly. (a) Determine the temperature of a black body that would emit radiation peaked at the same wavelength. (b) Based on your result, explain whether firefly radiation is blackbody radiation.

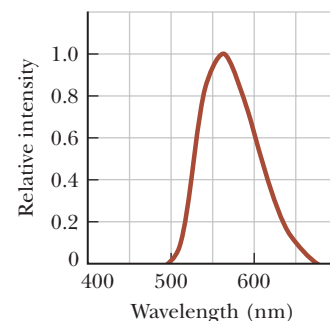


Figure P40.4

5. The average threshold of dark-adapted (scotopic) vision is $4.00 \times 10^{-11} \text{ W/m}^2$ at a central wavelength of 500 nm. If light with this intensity and wavelength enters the eye and the pupil is open to its maximum diameter of 8.50 mm, how many photons per second enter the eye?

6. (i) Calculate the energy, in electron volts, of a photon whose frequency is (a) 620 THz, (b) 3.10 GHz, and (c) 46.0 MHz. (ii) Determine the corresponding wavelengths for the photons listed in part (i) and (iii) state the classification of each on the electromagnetic spectrum.

7. (a) What is the surface temperature of Betelgeuse, a red giant star in the constellation Orion (Fig. 40.4), which radiates with a peak wavelength of about 970 nm? (b) Rigel, a bluish-white star in Orion, radiates with a peak wavelength of 145 nm. Find the temperature of Rigel's surface.

8. An FM radio transmitter has a power output of 150 kW and operates at a frequency of 99.7 MHz. How many photons per second does the transmitter emit?

9. The human eye is most sensitive to 560-nm (green) light. What is the temperature of a black body that would radiate most intensely at this wavelength?

10. The radius of our Sun is $6.96 \times 10^8 \text{ m}$, and its total power output is $3.85 \times 10^{26} \text{ W}$. (a) Assuming the Sun's surface emits as a black body, calculate its surface temperature. (b) Using the result of part (a), find λ_{max} for the Sun.

11. A black body at 7 500 K consists of an opening of diameter 0.050 0 mm, looking into an oven. Find the number of photons per second escaping the opening and having wavelengths between 500 nm and 501 nm.

12. Consider a black body of surface area 20.0 cm^2 and temperature 5 000 K. (a) How much power does it radiate? (b) At what wavelength does it radiate most intensely? Find the spectral power per wavelength interval at (c) this wavelength and at wavelengths of (d) 1.00 nm (an x- or gamma ray), (e) 5.00 nm (ultraviolet light or an x-ray), (f) 400 nm (at the boundary between UV and visible light), (g) 700 nm (at the boundary between visible and infrared light), (h) 1.00 mm (infrared light or a microwave), and (i) 10.0 cm (a microwave or radio wave). (j) Approximately how much power does the object radiate as visible light?

13. **Review.** This problem is about how strongly matter is coupled to radiation, the subject with which quantum mechanics began. For a simple model, consider a solid iron sphere 2.00 cm in radius. Assume its temperature is always uniform throughout its volume. (a) Find the mass of the sphere. (b) Assume the sphere is at 20.0°C and has emissivity 0.860. Find the power with which it radiates electromagnetic waves. (c) If it were alone in the Universe, at what rate would the sphere's temperature be changing? (d) Assume Wien's law describes the sphere. Find the wavelength λ_{max} of electromagnetic radiation it emits most strongly. Although it emits a spectrum of waves having all different wavelengths,

assume its power output is carried by photons of wavelength λ_{max} . Find (e) the energy of one photon and (f) the number of photons it emits each second.

14. Show that at long wavelengths, Planck's radiation law (Eq. 40.6) reduces to the Rayleigh-Jeans law (Eq. 40.3).

15. A simple pendulum has a length of 1.00 m and a mass of 1.00 kg. The maximum horizontal displacement of the pendulum bob from equilibrium is 3.00 cm. Calculate the quantum number n for the pendulum.

16. A pulsed ruby laser emits light at 694.3 nm. For a 14.0-ps pulse containing 3.00 J of energy, find (a) the physical length of the pulse as it travels through space and (b) the number of photons in it. (c) Assuming that the beam has a circular cross-section of 0.600 cm diameter, find the number of photons per cubic millimeter.

Section 40.2 The Photoelectric Effect

17. Molybdenum has a work function of 4.20 eV. (a) Find the cutoff wavelength and cutoff frequency for the photoelectric effect. (b) What is the stopping potential if the incident light has a wavelength of 180 nm?

18. The work function for zinc is 4.31 eV. (a) Find the cutoff wavelength for zinc. (b) What is the lowest frequency of light incident on zinc that releases photoelectrons from its surface? (c) If photons of energy 5.50 eV are incident on zinc, what is the maximum kinetic energy of the ejected photoelectrons?

19. Two light sources are used in a photoelectric experiment to determine the work function for a particular metal surface. When green light from a mercury lamp ($\lambda = 546.1 \text{ nm}$) is used, a stopping potential of 0.376 V reduces the photocurrent to zero. (a) Based on this measurement, what is the work function for this metal? (b) What stopping potential would be observed when using the yellow light from a helium discharge tube ($\lambda = 587.5 \text{ nm}$)?

20. Lithium, beryllium, and mercury have work functions of 2.30 eV, 3.90 eV, and 4.50 eV, respectively. Light with a wavelength of 400 nm is incident on each of these metals. (a) Determine which of these metals exhibit the photoelectric effect for this incident light. Explain your reasoning. (b) Find the maximum kinetic energy for the photoelectrons in each case.

21. Electrons are ejected from a metallic surface with speeds of up to $4.60 \times 10^5 \text{ m/s}$ when light with a wavelength of 625 nm is used. (a) What is the work function of the surface? (b) What is the cutoff frequency for this surface?

22. From the scattering of sunlight, J. J. Thomson calculated the classical radius of the electron as having the value $2.82 \times 10^{-15} \text{ m}$. Sunlight with an intensity of 500 W/m^2 falls on a disk with this radius. Assume light is a classical wave and the light striking the disk is completely absorbed. (a) Calculate the time interval required to accumulate 1.00 eV of energy. (b) Explain how your result for part (a) compares with the observation that photoelectrons are emitted promptly (within 10^{-9} s).

- 23. Review.** An isolated copper sphere of radius 5.00 cm, initially uncharged, is illuminated by ultraviolet light of wavelength 200 nm. The work function for copper is 4.70 eV. What charge does the photoelectric effect induce on the sphere?
- 24.** The work function for platinum is 6.35 eV. Ultraviolet light of wavelength 150 nm is incident on the clean surface of a platinum sample. We wish to predict the stopping voltage we will need for electrons ejected from the surface. (a) What is the photon energy of the ultraviolet light? (b) How do you know that these photons will eject electrons from platinum? (c) What is the maximum kinetic energy of the ejected photoelectrons? (d) What stopping voltage would be required to arrest the current of photoelectrons?

Section 40.3 The Compton Effect

- 25.** X-rays are scattered from a target at an angle of 55.0° with the direction of the incident beam. Find the wavelength shift of the scattered x-rays.
- 26.** A photon having wavelength λ scatters off a free electron at A (Fig. P40.26), producing a second photon having wavelength λ' . This photon then scatters off another free electron at B , producing a third photon having wavelength λ'' and moving in a direction directly opposite the original photon as shown in the figure. Determine the value of $\Delta\lambda = \lambda'' - \lambda$.

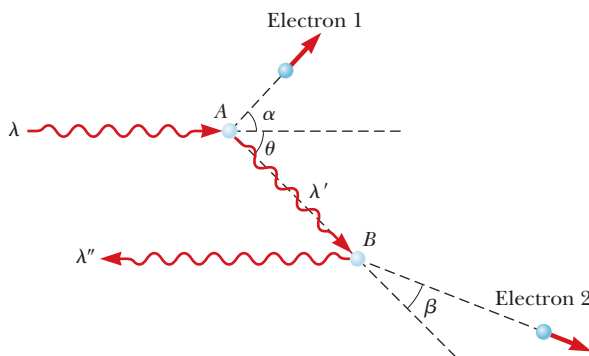


Figure P40.26

- 27.** A 0.110-nm photon collides with a stationary electron. After the collision, the electron moves forward and the photon recoils backward. Find the momentum and the kinetic energy of the electron.
- 28.** X-rays with a wavelength of 120.0 pm undergo Compton scattering. (a) Find the wavelengths of the photons scattered at angles of 30.0° , 60.0° , 90.0° , 120° , 150° , and 180° . (b) Find the energy of the scattered electron in each case. (c) Which of the scattering angles provides the electron with the greatest energy? Explain whether you could answer this question without doing any calculations.
- 29.** A 0.001 60-nm photon scatters from a free electron. (a) For what (photon) scattering angle does the recoiling electron have kinetic energy equal to the energy of the scattered photon?
- 30.** After a 0.800-nm x-ray photon scatters from a free electron, the electron recoils at 1.40×10^6 m/s. (a) What

is the Compton shift in the photon's wavelength? (b) Through what angle is the photon scattered?

- 31.** A photon having energy $E_0 = 0.880$ MeV is scattered by a free electron initially at rest such that the scattering angle of the scattered electron is equal to that of the scattered photon as shown in Figure P40.31. (a) Determine the scattering angle of the photon and the electron. (b) Determine the energy and momentum of the scattered photon. (c) Determine the kinetic energy and momentum of the scattered electron.

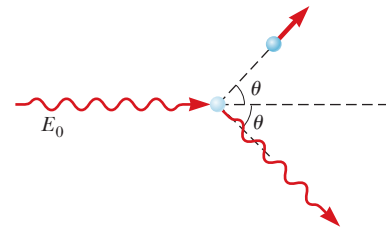


Figure P40.31 Problems 31 and 32.

- 32.** A photon having energy E_0 is scattered by a free electron initially at rest such that the scattering angle of the scattered electron is equal to that of the scattered photon as shown in Figure P40.31. (a) Determine the angle θ . (b) Determine the energy and momentum of the scattered photon. (c) Determine the kinetic energy and momentum of the scattered electron.
- 33.** X-rays having an energy of 300 keV undergo Compton scattering from a target. The scattered rays are detected at 37.0° relative to the incident rays. Find (a) the Compton shift at this angle, (b) the energy of the scattered x-ray, and (c) the energy of the recoiling electron.
- 34.** In a Compton scattering experiment, a photon is scattered through an angle of 90.0° and the electron is set into motion in a direction at an angle of 20.0° to the original direction of the photon. (a) Explain how this information is sufficient to determine uniquely the wavelength of the scattered photon and (b) find this wavelength.
- 35.** In a Compton scattering experiment, an x-ray photon scatters through an angle of 17.4° from a free electron that is initially at rest. The electron recoils with a speed of 2 180 km/s. Calculate (a) the wavelength of the incident photon and (b) the angle through which the electron scatters.
- 36.** Find the maximum fractional energy loss for a 0.511-MeV gamma ray that is Compton scattered from (a) a free electron and (b) a free proton.

Section 40.4 The Nature of Electromagnetic Waves

- 37.** An electromagnetic wave is called *ionizing radiation* if its photon energy is larger than, say, 10.0 eV so that a single photon has enough energy to break apart an atom. With reference to Figure P40.37 (page 1264), explain what region or regions of the electromagnetic spectrum fit this definition of ionizing radiation and

what do not. (If you wish to consult a larger version of Fig. P40.37, see Fig. 34.13.)

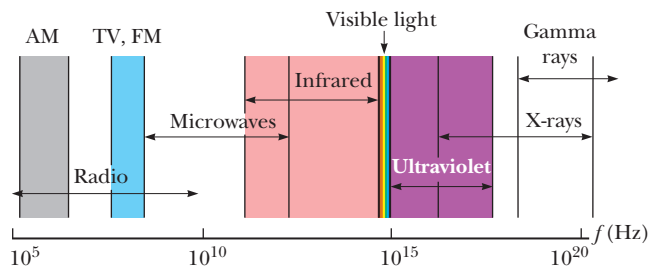


Figure P40.37

- 38. Review.** A helium–neon laser produces a beam of diameter 1.75 mm, delivering 2.00×10^{18} photons/s. Each photon has a wavelength of 633 nm. Calculate the amplitudes of (a) the electric fields and (b) the magnetic fields inside the beam. (c) If the beam shines perpendicularly onto a perfectly reflecting surface, what force does it exert on the surface? (d) If the beam is absorbed by a block of ice at 0°C for 1.50 h, what mass of ice is melted?

Section 40.5 The Wave Properties of Particles

- 39.** (a) Calculate the momentum of a photon whose wavelength is 4.00×10^{-7} m. (b) Find the speed of an electron having the same momentum as the photon in part (a).
- 40.** (a) An electron has a kinetic energy of 3.00 eV. Find its wavelength. (b) **What If?** A photon has energy 3.00 eV. Find its wavelength.
- 41.** The resolving power of a microscope depends on the wavelength used. If you wanted to “see” an atom, a wavelength of approximately 1.00×10^{-11} m would be required. (a) If electrons are used (in an electron microscope), what minimum kinetic energy is required for the electrons? (b) **What If?** If photons are used, what minimum photon energy is needed to obtain the required resolution?
- 42.** Calculate the de Broglie wavelength for a proton moving with a speed of 1.00×10^6 m/s.
- 43.** In the Davisson–Germer experiment, 54.0-eV electrons were diffracted from a nickel lattice. If the first maximum in the diffraction pattern was observed at $\phi = 50.0^\circ$ (Fig. P40.43), what was the lattice spacing a between the vertical columns of atoms in the figure?

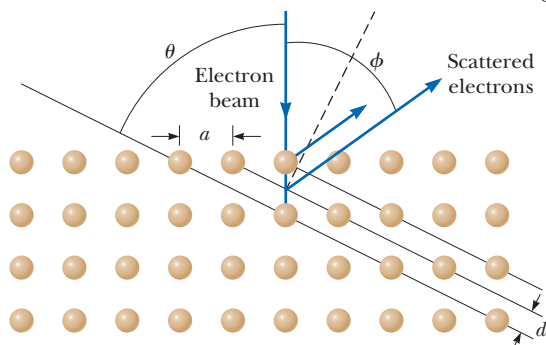


Figure P40.43

- 44.** The nucleus of an atom is on the order of 10^{-14} m in diameter. For an electron to be confined to a nucleus, its de Broglie wavelength would have to be on this order of magnitude or smaller. (a) What would be the kinetic energy of an electron confined to this region? (b) Make an order-of-magnitude estimate of the electric potential energy of a system of an electron inside an atomic nucleus. (c) Would you expect to find an electron in a nucleus? Explain.
- 45.** Robert Hofstadter won the 1961 Nobel Prize in Physics for his pioneering work in studying the scattering of 20-GeV electrons from nuclei. (a) What is the γ factor for an electron with total energy 20.0 GeV, defined by $\gamma = 1/\sqrt{1 - u^2/c^2}$? (b) Find the momentum of the electron. (c) Find the wavelength of the electron. (d) State how the wavelength compares with the diameter of an atomic nucleus, typically on the order of 10^{-14} m.
- 46.** *Why is the following situation impossible?* After learning about de Broglie’s hypothesis that material particles of momentum p move as waves with wavelength $\lambda = h/p$, an 80-kg student has grown concerned about being diffracted when passing through a doorway of width $w = 75$ cm. Assume significant diffraction occurs when the width of the diffraction aperture is less than ten times the wavelength of the wave being diffracted. Together with his classmates, the student performs precision experiments and finds that he does indeed experience measurable diffraction.
- 47.** A photon has an energy equal to the kinetic energy of an electron with speed u , which may be close to the speed of light c . (a) Calculate the ratio of the wavelength of the photon to the wavelength of the electron. (b) Evaluate the ratio for the particle speed $u = 0.900c$. (c) **What If?** What would happen to the answer to part (b) if the material particle were a proton instead of an electron? (d) Evaluate the ratio for the particle speed $u = 0.00100c$. (e) What value does the ratio of the wavelengths approach at high particle speeds? (f) At low particle speeds?
- 48.** (a) Show that the frequency f and wavelength λ of a freely moving quantum particle with mass are related by the expression

$$\left(\frac{f}{c}\right)^2 = \frac{1}{\lambda^2} + \frac{1}{\lambda_C^2}$$

where $\lambda_C = h/mc$ is the Compton wavelength of the particle. (b) Is it ever possible for a particle having nonzero mass to have the same wavelength *and* frequency as a photon? Explain.

Section 40.6 A New Model: The Quantum Particle

- 49.** Consider a freely moving quantum particle with mass m and speed u . Its energy is $E = K = \frac{1}{2}mu^2$. (a) Determine the phase speed of the quantum wave representing the particle and (b) show that it is different from the speed at which the particle transports mass and energy.
- 50.** For a free relativistic quantum particle moving with speed u , the total energy of the particle is $E = hf = \hbar\omega = \sqrt{p^2c^2 + m^2c^4}$ and the momentum is $p = h/\lambda = \hbar k =$

γmu . For the quantum wave representing the particle, the group speed is $v_g = d\omega/dk$. Prove that the group speed of the wave is the same as the speed of the particle.

Section 40.7 The Double-Slit Experiment Revisited

- 51.** Neutrons traveling at 0.400 m/s are directed through a pair of slits separated by 1.00 mm. An array of detectors is placed 10.0 m from the slits. (a) What is the de Broglie wavelength of the neutrons? (b) How far off axis is the first zero-intensity point on the detector array? (c) When a neutron reaches a detector, can we say which slit the neutron passed through? Explain.
- 52.** In a certain vacuum tube, electrons evaporate from a hot cathode at a slow, steady rate and accelerate from rest through a potential difference of 45.0 V. Then they travel 28.0 cm as they pass through an array of slits and fall on a screen to produce an interference pattern. If the beam current is below a certain value, only one electron at a time will be in flight in the tube. In this situation, the interference pattern still appears, showing that each individual electron can interfere with itself. What is the maximum value for the beam current that will result in only one electron at a time in flight in the tube?
- 53.** A modified oscilloscope is used to perform an electron interference experiment. Electrons are incident on a pair of narrow slits 0.060 0 μm apart. The bright bands in the interference pattern are separated by 0.400 mm on a screen 20.0 cm from the slits. Determine the potential difference through which the electrons were accelerated to give this pattern.

Section 40.8 The Uncertainty Principle

- 54.** Suppose a duck lives in a universe in which $h = 2\pi \text{ J} \cdot \text{s}$. The duck has a mass of 2.00 kg and is initially known to be within a pond 1.00 m wide. (a) What is the minimum uncertainty in the component of the duck's velocity parallel to the pond's width? (b) Assuming this uncertainty in speed prevails for 5.00 s, determine the uncertainty in the duck's position after this time interval.
- 55.** An electron and a 0.020 0-kg bullet each have a velocity of magnitude 500 m/s, accurate to within 0.010 0%. Within what lower limit could we determine the position of each object along the direction of the velocity?
- 56.** A 0.500-kg block rests on the frictionless, icy surface of a frozen pond. If the location of the block is measured to a precision of 0.150 cm and its mass is known exactly, what is the minimum uncertainty in the block's speed?
- 57.** The average lifetime of a muon is about 2 μs . Estimate the minimum uncertainty in the rest energy of a muon.
- 58.** Why is the following situation impossible? An air rifle is used to shoot 1.00-g particles at a speed of $v_x = 100 \text{ m/s}$. The rifle's barrel has a diameter of 2.00 mm. The rifle is mounted on a perfectly rigid support so that it is fired in exactly the same way each time. Because of the uncertainty principle, however, after

many firings, the diameter of the spray of pellets on a paper target is 1.00 cm.

- 59.** Use the uncertainty principle to show that if an electron were confined inside an atomic nucleus of diameter on the order of 10^{-14} m , it would have to be moving relativistically, whereas a proton confined to the same nucleus can be moving nonrelativistically.

Additional Problems

- 60.** The accompanying table shows data obtained in a photoelectric experiment. (a) Using these data, make a graph similar to Figure 40.11 that plots as a straight line. From the graph, determine (b) an experimental value for Planck's constant (in joule-seconds) and (c) the work function (in electron volts) for the surface. (Two significant figures for each answer are sufficient.)

Wavelength (nm)	Maximum Kinetic Energy of Photoelectrons (eV)
588	0.67
505	0.98
445	1.35
399	1.63

- 61.** Photons of wavelength 450 nm are incident on a metal. **AMT** The most energetic electrons ejected from the metal are bent into a circular arc of radius 20.0 cm by a magnetic field with a magnitude of $2.00 \times 10^{-5} \text{ T}$. What is the work function of the metal?
- 62. Review.** Photons of wavelength λ are incident on a metal. The most energetic electrons ejected from the metal are bent into a circular arc of radius R by a magnetic field having a magnitude B . What is the work function of the metal?
- 63. Review.** Design an incandescent lamp filament. A tungsten wire radiates electromagnetic waves with power 75.0 W when its ends are connected across a 120-V power supply. Assume its constant operating temperature is 2 900 K and its emissivity is 0.450. Also assume it takes in energy only by electric transmission and emits energy only by electromagnetic radiation. You may take the resistivity of tungsten at 2 900 K as $7.13 \times 10^{-7} \Omega \cdot \text{m}$. Specify (a) the radius and (b) the length of the filament.
- 64.** Derive the equation for the Compton shift (Eq. 40.13) from Equations 40.14 through 40.16.
- 65.** Figure P40.65 shows the stopping potential versus the incident photon frequency for the photoelectric effect

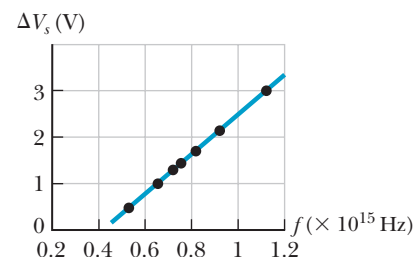


Figure P40.65

for sodium. Use the graph to find (a) the work function of sodium, (b) the ratio h/e , and (c) the cutoff wavelength. The data are taken from R. A. Millikan, *Physical Review* 7:362 (1916).

66. A photon of initial energy E_0 undergoes Compton scattering at an angle θ from a free electron (mass m_e) initially at rest. Derive the following relationship for the final energy E' of the scattered photon:

$$E' = \frac{E_0}{1 + \left(\frac{E_0}{m_e c^2}\right)(1 - \cos \theta)}$$

67. A daredevil's favorite trick is to step out of a 16th-story window and fall 50.0 m into a pool. A news reporter takes a picture of the 75.0-kg daredevil just before he makes a splash, using an exposure time of 5.00 ms. Find (a) the daredevil's de Broglie wavelength at this moment, (b) the uncertainty of his kinetic energy measurement during the 5.00-ms time interval, and (c) the percent error caused by such an uncertainty.

68. Show that the ratio of the Compton wavelength λ_C to the de Broglie wavelength $\lambda = h/p$ for a relativistic electron is

$$\frac{\lambda_C}{\lambda} = \left[\left(\frac{E}{m_e c^2} \right)^2 - 1 \right]^{1/2}$$

where E is the total energy of the electron and m_e is its mass.

69. Monochromatic ultraviolet light with intensity 550 W/m^2 is incident normally on the surface of a metal that has a work function of 3.44 eV. Photoelectrons are emitted with a maximum speed of 420 km/s. (a) Find the maximum possible rate of photoelectron emission from 1.00 cm^2 of the surface by imagining that every photon produces one photoelectron. (b) Find the electric current these electrons constitute. (c) How do you suppose the actual current compares with this maximum possible current?
70. A π^0 meson is an unstable particle produced in high-energy particle collisions. Its rest energy is approximately 135 MeV, and it exists for a lifetime of only $8.70 \times 10^{-17} \text{ s}$ before decaying into two gamma rays. Using the uncertainty principle, estimate the fractional uncertainty $\Delta m/m$ in its mass determination.
71. The neutron has a mass of $1.67 \times 10^{-27} \text{ kg}$. Neutrons emitted in nuclear reactions can be slowed down by collisions with matter. They are referred to as thermal neutrons after they come into thermal equilibrium with the environment. The average kinetic energy ($\frac{3}{2}k_B T$) of a thermal neutron is approximately 0.04 eV. (a) Calculate the de Broglie wavelength of a neutron with a kinetic energy of 0.040 eV. (b) How does your answer compare with the characteristic atomic spacing in a crystal? (c) Explain whether you expect thermal neutrons to exhibit diffraction effects when scattered by a crystal.

Challenge Problems

72. A woman on a ladder drops small pellets toward a point target on the floor. (a) Show that, according to the uncertainty principle, the average miss distance must be at least

$$\Delta x_f = \left(\frac{2\hbar}{m} \right)^{1/2} \left(\frac{2H}{g} \right)^{1/4}$$

where H is the initial height of each pellet above the floor and m is the mass of each pellet. Assume that the spread in impact points is given by $\Delta x_f = \Delta x_i + (\Delta v_x)t$. (b) If $H = 2.00 \text{ m}$ and $m = 0.500 \text{ g}$, what is Δx_f ?

73. **Review.** A light source emitting radiation at frequency $7.00 \times 10^{14} \text{ Hz}$ is incapable of ejecting photoelectrons from a certain metal. In an attempt to use this source to eject photoelectrons from the metal, the source is given a velocity toward the metal. (a) Explain how this procedure can produce photoelectrons. (b) When the speed of the light source is equal to $0.280c$, photoelectrons just begin to be ejected from the metal. What is the work function of the metal? (c) When the speed of the light source is increased to $0.900c$, determine the maximum kinetic energy of the photoelectrons.

74. Using conservation principles, prove that a photon cannot transfer all its energy to a free electron.

75. The total power per unit area radiated by a black body at a temperature T is the area under the $I(\lambda, T)$ -versus- λ curve as shown in Figure 40.3. (a) Show that this power per unit area is

$$\int_0^\infty I(\lambda, T) d\lambda = \sigma T^4$$

where $I(\lambda, T)$ is given by Planck's radiation law and σ is a constant independent of T . This result is known as Stefan's law. (See Section 20.7.) To carry out the integration, you should make the change of variable $x = hc/\lambda k_B T$ and use

$$\int_0^\infty \frac{x^3 dx}{e^x - 1} = \frac{\pi^4}{15}$$

- (b) Show that the Stefan-Boltzmann constant σ has the value

$$\sigma = \frac{2\pi^5 k_B^4}{15c^2 h^3} = 5.67 \times 10^{-8} \text{ W/m}^2 \cdot \text{K}^4$$

76. (a) Derive Wien's displacement law from Planck's law. Proceed as follows. In Figure 40.3, notice that the wavelength at which a black body radiates with greatest intensity is the wavelength for which the graph of $I(\lambda, T)$ versus λ has a horizontal tangent. From Equation 40.6, evaluate the derivative $dI/d\lambda$. Set it equal to zero. Solve the resulting transcendental equation numerically to prove that $hc/\lambda_{\text{max}} k_B T = 4.965 \dots$ or $\lambda_{\text{max}} T = hc/4.965 k_B$. (b) Evaluate the constant as precisely as possible and compare it with Wien's experimental value.

Quantum Mechanics

CHAPTER

41



- 41.1 The Wave Function
- 41.2 Analysis Model: Quantum Particle Under Boundary Conditions
- 41.3 The Schrödinger Equation
- 41.4 A Particle in a Well of Finite Height
- 41.5 Tunneling Through a Potential Energy Barrier
- 41.6 Applications of Tunneling
- 41.7 The Simple Harmonic Oscillator

In this chapter, we introduce quantum mechanics, an extremely successful theory for explaining the behavior of microscopic particles. This theory, developed in the 1920s by Erwin Schrödinger, Werner Heisenberg, and others, enables us to understand a host of phenomena involving atoms, molecules, nuclei, and solids. The discussion in this chapter follows from the quantum particle model that was developed in Chapter 40 and incorporates some of the features of the waves under boundary conditions model that was explored in Chapter 18. We also discuss practical applications of quantum mechanics, including the scanning tunneling microscope and nanoscale devices that may be used in future quantum computers. Finally, we shall return to the simple harmonic oscillator that was introduced in Chapter 15 and examine it from a quantum mechanical point of view.

An opened flash drive of the type used as an external data storage device for a computer. Flash drives are employed extensively in computers, digital cameras, cell phones, and other devices. Writing data to and erasing data from flash drives incorporate the phenomenon of quantum tunneling, which we explore in this chapter. (Image copyright Vasilius, 2009. Used under license from Shutterstock.com)

41.1 The Wave Function

In Chapter 40, we introduced some new and strange ideas. In particular, we concluded on the basis of experimental evidence that both matter and electromagnetic radiation are sometimes best modeled as particles and sometimes as waves, depending on the phenomenon being observed. We can improve our understanding of quantum physics by making another connection between particles and waves using the notion of probability, a concept that was introduced in Chapter 40.

We begin by discussing electromagnetic radiation using the particle model. The probability per unit volume of finding a photon in a given region of space at an instant of time is proportional to the number of photons per unit volume at that time:

$$\frac{\text{Probability}}{V} \propto \frac{N}{V}$$

The number of photons per unit volume is proportional to the intensity of the radiation:

$$\frac{N}{V} \propto I$$

Now, let's form a connection between the particle model and the wave model by recalling that the intensity of electromagnetic radiation is proportional to the square of the electric field amplitude E for the electromagnetic wave (Eq. 34.24):

$$I \propto E^2$$

Equating the beginning and the end of this series of proportionalities gives

$$\frac{\text{Probability}}{V} \propto E^2 \quad (41.1)$$

Therefore, for electromagnetic radiation, the probability per unit volume of finding a particle associated with this radiation (the photon) is proportional to the square of the amplitude of the associated electromagnetic wave.

Recognizing the wave-particle duality of both electromagnetic radiation and matter, we should suspect a parallel proportionality for a material particle: the probability per unit volume of finding the particle is proportional to the square of the amplitude of a wave representing the particle. In Chapter 40, we learned that there is a de Broglie wave associated with every particle. The amplitude of the de Broglie wave associated with a particle is not a measurable quantity because the wave function representing a particle is generally a complex function as we discuss below. In contrast, the electric field for an electromagnetic wave is a real function. The matter analog to Equation 41.1 relates the square of the amplitude of the wave to the probability per unit volume of finding the particle. Hence, the amplitude of the wave associated with the particle is called the **probability amplitude**, or the **wave function**, and it has the symbol Ψ .

In general, the complete wave function Ψ for a system depends on the positions of all the particles in the system and on time; therefore, it can be written $\Psi(\vec{\mathbf{r}}_1, \vec{\mathbf{r}}_2, \vec{\mathbf{r}}_3, \dots, \vec{\mathbf{r}}_j, \dots, t)$, where $\vec{\mathbf{r}}_j$ is the position vector of the j th particle in the system. For many systems of interest, including all those we study in this text, the wave function Ψ is mathematically separable in space and time and can be written as a product of a space function ψ for one particle of the system and a complex time function:¹

$$\Psi(\vec{\mathbf{r}}_1, \vec{\mathbf{r}}_2, \vec{\mathbf{r}}_3, \dots, \vec{\mathbf{r}}_j, \dots, t) = \psi(\vec{\mathbf{r}}_j) e^{-i\omega t} \quad (41.2)$$

where $\omega (= 2\pi f)$ is the angular frequency of the wave function and $i = \sqrt{-1}$.

For any system in which the potential energy is time-independent and depends only on the positions of particles within the system, the important information about the system is contained within the space part of the wave function. The time part is simply the factor $e^{-i\omega t}$. Therefore, an understanding of ψ is the critical aspect of a given problem.

The wave function ψ is often complex-valued. The absolute square $|\psi|^2 = \psi^* \psi$, where ψ^* is the complex conjugate² of ψ , is always real and positive and is proportional to the probability per unit volume of finding a particle at a given point at some instant. The wave function contains within it all the information that can be known about the particle.

¹The standard form of a complex number is $a + ib$. The notation $e^{i\theta}$ is equivalent to the standard form as follows:

$$e^{i\theta} = \cos \theta + i \sin \theta$$

Therefore, the notation $e^{-i\omega t}$ in Equation 41.2 is equivalent to $\cos(-\omega t) + i \sin(-\omega t) = \cos \omega t - i \sin \omega t$.

²For a complex number $z = a + ib$, the complex conjugate is found by changing i to $-i$: $z^* = a - ib$. The product of a complex number and its complex conjugate is always real and positive. That is, $z^* z = (a - ib)(a + ib) = a^2 - (ib)^2 = a^2 - (i)^2 b^2 = a^2 + b^2$.

Although ψ cannot be measured, we can measure the real quantity $|\psi|^2$, which can be interpreted as follows. If ψ represents a single particle, then $|\psi|^2$ —called the **probability density**—is the relative probability per unit volume that the particle will be found at any given point in the volume. This interpretation can also be stated in the following manner. If dV is a small volume element surrounding some point, the probability of finding the particle in that volume element is

$$P(x, y, z) dV = |\psi|^2 dV \quad (41.3)$$

This probabilistic interpretation of the wave function was first suggested by Max Born (1882–1970) in 1928. In 1926, Erwin Schrödinger proposed a wave equation that describes the manner in which the wave function changes in space and time. The *Schrödinger wave equation*, which we shall examine in Section 41.3, represents a key element in the theory of quantum mechanics.

The concepts of quantum mechanics, strange as they sometimes may seem, developed from classical ideas. In fact, when the techniques of quantum mechanics are applied to macroscopic systems, the results are essentially identical to those of classical physics. This blending of the two approaches occurs when the de Broglie wavelength is small compared with the dimensions of the system. The situation is similar to the agreement between relativistic mechanics and classical mechanics when $v \ll c$.

In Section 40.5, we found that the de Broglie equation relates the momentum of a particle to its wavelength through the relation $p = h/\lambda$. If an ideal free particle has a precisely known momentum p_x , its wave function is an infinitely long sinusoidal wave of wavelength $\lambda = h/p_x$ and the particle has equal probability of being at any point along the x axis (Fig. 40.18a). The wave function ψ for such a free particle moving along the x axis can be written as

$$\psi(x) = Ae^{ikx} \quad (41.4)$$

where A is a constant amplitude and $k = 2\pi/\lambda$ is the angular wave number (Eq. 16.8) of the wave representing the particle.³

One-Dimensional Wave Functions and Expectation Values

This section discusses only one-dimensional systems, where the particle must be located along the x axis, so the probability $|\psi|^2 dV$ in Equation 41.3 is modified to become $|\psi|^2 dx$. The probability that the particle will be found in the infinitesimal interval dx around the point x is

$$P(x) dx = |\psi|^2 dx \quad (41.5)$$

Although it is not possible to specify the position of a particle with complete certainty, it is possible through $|\psi|^2$ to specify the probability of observing it in a region surrounding a given point x . The probability of finding the particle in the arbitrary interval $a \leq x \leq b$ is

$$P_{ab} = \int_a^b |\psi|^2 dx \quad (41.6)$$

The probability P_{ab} is the area under the curve of $|\psi|^2$ versus x between the points $x = a$ and $x = b$ as in Figure 41.1.

Experimentally, there is a finite probability of finding a particle in an interval near some point at some instant. The value of that probability must lie between the

◀ Probability density $|\psi|^2$

Pitfall Prevention 41.1

The Wave Function Belongs to a System The common language in quantum mechanics is to associate a wave function with a particle. The wave function, however, is determined by the particle *and* its interaction with its environment, so it more rightfully belongs to a system. In many cases, the particle is the only part of the system that experiences a change, which is why the common language has developed. You will see examples in the future in which it is more proper to think of the system wave function rather than the particle wave function.

◀ Wave function for a free particle

The probability of a particle being in the interval $a \leq x \leq b$ is the area under the probability density curve from a to b .

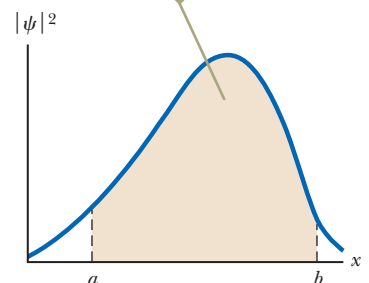


Figure 41.1 An arbitrary probability density curve for a particle.

³For the free particle, the full wave function, based on Equation 41.2, is

$$\Psi(x, t) = Ae^{ikx}e^{-i\omega t} = Ae^{i(kx - \omega t)} = A[\cos(kx - \omega t) + i \sin(kx - \omega t)]$$

The real part of this wave function has the same form as the waves we added together to form wave packets in Section 40.6.

limits 0 and 1. For example, if the probability is 0.30, there is a 30% chance of finding the particle in the interval.

Because the particle must be somewhere along the x axis, the sum of the probabilities over all values of x must be 1:

Normalization condition on ψ ▶

$$\int_{-\infty}^{\infty} |\psi|^2 dx = 1 \quad (41.7)$$

Any wave function satisfying Equation 41.7 is said to be **normalized**. Normalization is simply a statement that the particle exists at some point in space.

Once the wave function for a particle is known, it is possible to calculate the average position at which you would expect to find the particle after many measurements. This average position is called the **expectation value** of x and is defined by the equation

Expectation value ▶
for position x

$$\langle x \rangle \equiv \int_{-\infty}^{\infty} \psi^* x \psi dx \quad (41.8)$$

(Brackets, $\langle . . \rangle$, are used to denote expectation values.) Furthermore, one can find the expectation value of any function $f(x)$ associated with the particle by using the following equation:⁴

Expectation value for ▶
a function $f(x)$

$$\langle f(x) \rangle \equiv \int_{-\infty}^{\infty} \psi^* f(x) \psi dx \quad (41.9)$$

- Quick Quiz 41.1** Consider the wave function for the free particle, Equation 41.4.
 ⋮ At what value of x is the particle most likely to be found at a given time? (a) at
 ⋮ $x = 0$ (b) at small nonzero values of x (c) at large values of x (d) anywhere along
 • the x axis

Example 41.1 A Wave Function for a Particle

Consider a particle whose wave function is graphed in Figure 41.2 and is given by

$$\psi(x) = Ae^{-ax^2}$$

(A) What is the value of A if this wave function is normalized?

SOLUTION

Conceptualize The particle is not a free particle because the wave function is not a sinusoidal function. Figure 41.2 indicates that the particle is constrained to remain close to $x = 0$ at all times. Think of a physical system in which the particle always stays close to a given point. Examples of such systems are a block on a spring, a marble at the bottom of a bowl, and the bob of a simple pendulum.

Categorize Because the statement of the problem describes the wave nature of a particle, this example requires a quantum approach rather than a classical approach.

Analyze Apply the normalization condition, Equation 41.7, to the wave function:

$$\int_{-\infty}^{\infty} |\psi|^2 dx = \int_{-\infty}^{\infty} (Ae^{-ax^2})^2 dx = A^2 \int_{-\infty}^{\infty} e^{-2ax^2} dx = 1$$

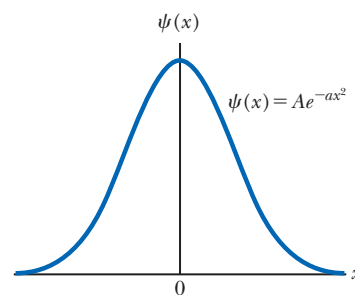


Figure 41.2 (Example 41.1) A symmetric wave function for a particle, given by $\psi(x) = Ae^{-ax^2}$.

⁴Expectation values are analogous to “weighted averages,” in which each possible value of a function is multiplied by the probability of the occurrence of that value before summing over all possible values. We write the expectation value as $\int_{-\infty}^{\infty} \psi^* f(x) \psi dx$ rather than $\int_{-\infty}^{\infty} f(x) \psi^2 dx$ because $f(x)$ may be represented by an operator (such as a derivative) rather than a simple multiplicative function in more advanced treatments of quantum mechanics. In these situations, the operator is applied only to ψ and not to ψ^* .

41.1 continued

Express the integral as the sum of two integrals:

$$(1) \quad A^2 \int_{-\infty}^{\infty} e^{-2ax^2} dx = A^2 \left(\int_0^{\infty} e^{-2ax^2} dx + \int_{-\infty}^0 e^{-2ax^2} dx \right) = 1$$

Change the integration variable from x to $-x$ in the second integral:

$$\int_{-\infty}^0 e^{-2ax^2} dx = \int_{\infty}^0 e^{-2a(-x)^2} (-dx) = -\int_{\infty}^0 e^{-2ax^2} dx$$

Reverse the order of the limits, which introduces a negative sign:

$$-\int_{\infty}^0 e^{-2ax^2} dx = \int_0^{\infty} e^{-2ax^2} dx$$

Substitute this expression for the second integral in Equation (1):

$$A^2 \left(\int_0^{\infty} e^{-2ax^2} dx + \int_0^{\infty} e^{-2ax^2} dx \right) = 1$$

$$(2) \quad 2A^2 \int_0^{\infty} e^{-2ax^2} dx = 1$$

Evaluate the integral with the help of Table B.6 in Appendix B:

$$\int_0^{\infty} e^{-2ax^2} dx = \frac{1}{2} \sqrt{\frac{\pi}{2a}}$$

Substitute this result into Equation (2) and solve for A :

$$2A^2 \left(\frac{1}{2} \sqrt{\frac{\pi}{2a}} \right) = 1 \rightarrow A = \left(\frac{2a}{\pi} \right)^{1/4}$$

(B) What is the expectation value of x for this particle?

SOLUTION

Evaluate the expectation value using Equation 41.8:

$$\begin{aligned} \langle x \rangle &\equiv \int_{-\infty}^{\infty} \psi^* x \psi dx = \int_{-\infty}^{\infty} (Ae^{-ax^2}) x (Ae^{-ax^2}) dx \\ &= A^2 \int_{-\infty}^{\infty} x e^{-2ax^2} dx \end{aligned}$$

As in part (A), express the integral as a sum of two integrals:

$$(3) \quad \langle x \rangle = A^2 \left(\int_0^{\infty} x e^{-2ax^2} dx + \int_{-\infty}^0 x e^{-2ax^2} dx \right)$$

Change the integration variable from x to $-x$ in the second integral:

$$\int_{-\infty}^0 x e^{-2ax^2} dx = \int_{\infty}^0 -x e^{-2a(-x)^2} (-dx) = \int_{\infty}^0 x e^{-2ax^2} dx$$

Reverse the order of the limits, which introduces a negative sign:

$$\int_{\infty}^0 x e^{-2ax^2} dx = -\int_0^{\infty} x e^{-2ax^2} dx$$

Substitute this expression for the second integral in Equation (3):

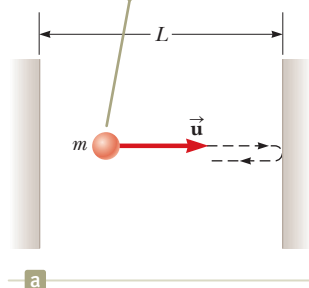
$$\langle x \rangle = A^2 \left(\int_0^{\infty} x e^{-2ax^2} dx - \int_0^{\infty} x e^{-2ax^2} dx \right) = 0$$

Finalize Given the symmetry of the wave function around $x = 0$ in Figure 41.2, it is not surprising that the average position of the particle is at $x = 0$. In Section 41.7, we show that the wave function studied in this example represents the lowest-energy state of the quantum harmonic oscillator.

41.2 Analysis Model: Quantum Particle Under Boundary Conditions

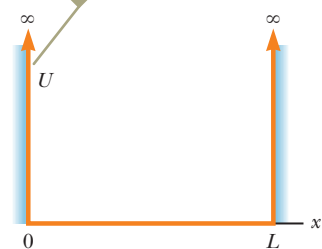
The free particle discussed in Section 41.1 has no boundary conditions; it can be anywhere in space. The particle in Example 41.1 is not a free particle. Figure 41.2 shows that the particle is always restricted to positions near $x = 0$. In this section, we shall investigate the effects of restrictions on the motion of a quantum particle.

This figure is a *pictorial representation* showing a particle of mass m and speed u bouncing between two impenetrable walls separated by a distance L .



a

This figure is a *graphical representation* showing the potential energy of the particle–box system. The blue areas are classically forbidden.



b

Figure 41.3 (a) The particle in a box. (b) The potential energy function for the system.

A Particle in a Box

We begin by applying some of the ideas we have developed to a simple physical problem, a particle confined to a one-dimensional region of space, called the *particle-in-a-box* problem (even though the “box” is one-dimensional!). From a classical viewpoint, if a particle is bouncing elastically back and forth along the x axis between two impenetrable walls separated by a distance L as in Figure 41.3a, it can be modeled as a particle under constant speed. If the speed of the particle is u , the magnitude of its momentum mu remains constant as does its kinetic energy. (Recall that in Chapter 39 we used u for particle speed to distinguish it from v , the speed of a reference frame.) Classical physics places no restrictions on the values of a particle’s momentum and energy. The quantum-mechanical approach to this problem is quite different and requires that we find the appropriate wave function consistent with the conditions of the situation.

Because the walls are impenetrable, there is zero probability of finding the particle outside the box, so the wave function $\psi(x)$ must be zero for $x < 0$ and $x > L$. To be a mathematically well-behaved function, $\psi(x)$ must be continuous in space. There must be no discontinuous jumps in the value of the wave function at any point.⁵ Therefore, if ψ is zero outside the walls, it must also be zero *at* the walls; that is, $\psi(0) = 0$ and $\psi(L) = 0$. Only those wave functions that satisfy these boundary conditions are allowed.

Figure 41.3b, a graphical representation of the particle–environment system, shows the potential energy of the particle–environment system as a function of the position of the particle. As long as the particle is inside the box, the potential energy of the system does not depend on the location of the particle and we can choose its constant value to be zero. Outside the box, we must ensure that the wave function is zero. We can do so by defining the system’s potential energy as infinitely large if the particle were outside the box. Therefore, the only way a particle could be outside the box is if the system has an infinite amount of energy, which is impossible.

The wave function for a particle in the box can be expressed as a real sinusoidal function:⁶

$$\psi(x) = A \sin\left(\frac{2\pi x}{\lambda}\right) \quad (41.10)$$

where λ is the de Broglie wavelength associated with the particle. This wave function must satisfy the boundary conditions at the walls. The boundary condition $\psi(0) = 0$ is satisfied already because the sine function is zero when $x = 0$. The boundary condition $\psi(L) = 0$ gives

$$\psi(L) = 0 = A \sin\left(\frac{2\pi L}{\lambda}\right)$$

which can only be true if

$$\frac{2\pi L}{\lambda} = n\pi \rightarrow \lambda = \frac{2L}{n} \quad (41.11)$$

where $n = 1, 2, 3, \dots$. Therefore, only certain wavelengths for the particle are allowed! Each of the allowed wavelengths corresponds to a quantum state for the system, and n is the quantum number. Incorporating Equation 41.11 in Equation 41.10 gives

$$\psi_n(x) = A \sin\left(\frac{2\pi x}{2L/n}\right) = A \sin\left(\frac{n\pi x}{L}\right) \quad (41.12)$$

Wave functions for a particle in a box

⁵If the wave function were not continuous at a point, the derivative of the wave function at that point would be infinite. This result leads to difficulties in the Schrödinger equation, for which the wave function is a solution as discussed in Section 41.3.

⁶We shall show this result explicitly in Section 41.3.

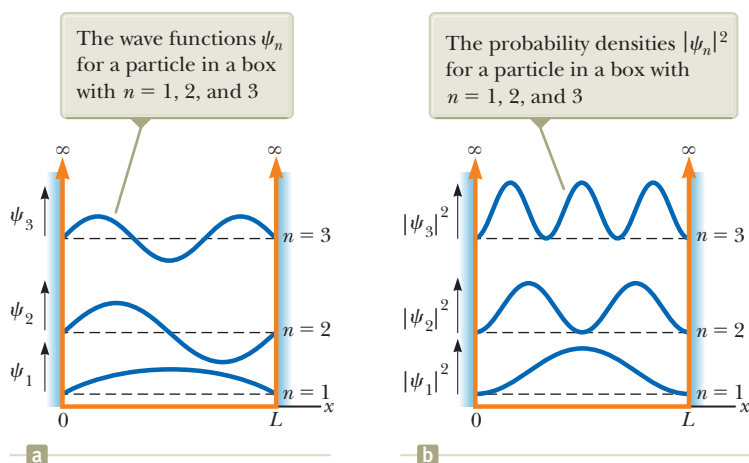


Figure 41.4 The first three allowed states for a particle confined to a one-dimensional box. The states are shown superimposed on the potential energy function of Figure 41.3b. The wave functions and probability densities are plotted vertically from separate axes that are offset vertically for clarity. The positions of these axes on the potential energy function suggest the relative energies of the states.

Normalizing this wave function shows that $A = \sqrt{2/L}$. (See Problem 18.) Therefore, the normalized wave function for the particle in a box is

$$\psi_n(x) = \sqrt{\frac{2}{L}} \sin\left(\frac{n\pi x}{L}\right) \quad (41.13)$$

Figures 41.4a and b are graphical representations of ψ_n versus x and $|\psi_n|^2$ versus x for $n = 1, 2$, and 3 for the particle in a box.⁷ Although a general wave function ψ can have positive and negative values, $|\psi|^2$ is always positive. Because $|\psi|^2$ represents a probability density, a negative value for $|\psi|^2$ would be meaningless.

Further inspection of Figure 41.4b shows that $|\psi|^2$ is zero at the boundaries, satisfying our boundary conditions. In addition, $|\psi|^2$ is zero at other points, depending on the value of n . For $n = 2$, $|\psi_2|^2 = 0$ at $x = L/2$; for $n = 3$, $|\psi_3|^2 = 0$ at $x = L/3$ and at $x = 2L/3$. The number of zero points increases by one each time the quantum number increases by one.

Because the wavelengths of the particle are restricted by the condition $\lambda = 2L/n$, the magnitude of the momentum of the particle is also restricted to specific values, which can be found from the expression for the de Broglie wavelength, Equation 40.17:

$$p = \frac{h}{\lambda} = \frac{h}{2L/n} = \frac{nh}{2L}$$

We have chosen the potential energy of the system to be zero when the particle is inside the box. Therefore, the energy of the system is simply the kinetic energy of the particle and the allowed values are given by

$$E_n = \frac{1}{2}mu^2 = \frac{p^2}{2m} = \frac{(nh/2L)^2}{2m}$$

$$E_n = \left(\frac{h^2}{8mL^2}\right)n^2 \quad n = 1, 2, 3, \dots \quad (41.14)$$

This expression shows that the energy of the particle is quantized. The lowest allowed energy corresponds to the **ground state**, which is the lowest energy state for any system. For the particle in a box, the ground state corresponds to $n = 1$, for which $E_1 = h^2/8mL^2$. Because $E_n = n^2E_1$, the **excited states** corresponding to $n = 2, 3, 4, \dots$ have energies given by $4E_1, 9E_1, 16E_1, \dots$

Normalized wave function for a particle in a box

Pitfall Prevention 41.2

Reminder: Energy Belongs to a System We often refer to the energy of a particle in commonly used language. As in Pitfall Prevention 41.1, we are actually describing the energy of the *system* of the particle and whatever environment is establishing the impenetrable walls. For the particle in a box, the only type of energy is kinetic energy belonging to the particle, which is the origin of the common description.

Quantized energies for a particle in a box

⁷Note that $n = 0$ is not allowed because, according to Equation 41.12, the wave function would be $\psi = 0$, which is not a physically reasonable wave function. For example, it cannot be normalized because $\int_{-\infty}^{\infty} |\psi|^2 dx = \int_{-\infty}^{\infty} (0) dx = 0$, but Equation 41.7 tells us that this integral must equal 1.

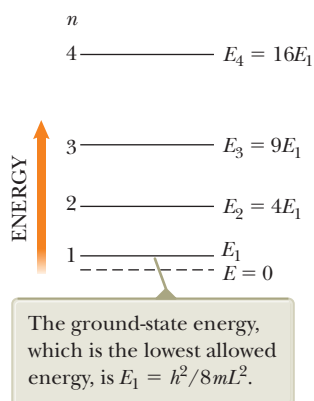


Figure 41.5 Energy-level diagram for a particle confined to a one-dimensional box of length L .

Figure 41.5 is an energy-level diagram describing the energy values of the allowed states. Because the lowest energy of the particle in a box is not zero, then, according to quantum mechanics, the particle can never be at rest! The smallest energy it can have, corresponding to $n = 1$, is called the **ground-state energy**. This result contradicts the classical viewpoint, in which $E = 0$ is an acceptable state, as are *all* positive values of E .

Quick Quiz 41.2 Consider an electron, a proton, and an alpha particle (a helium nucleus), each trapped separately in identical boxes. (i) Which particle corresponds to the highest ground-state energy? (a) the electron (b) the proton (c) the alpha particle (d) The ground-state energy is the same in all three cases. (ii) Which particle has the longest wavelength when the system is in the ground state? (a) the electron (b) the proton (c) the alpha particle (d) All three particles have the same wavelength.

Quick Quiz 41.3 A particle is in a box of length L . Suddenly, the length of the box is increased to $2L$. What happens to the energy levels shown in Figure 41.5? (a) nothing; they are unaffected. (b) They move farther apart. (c) They move closer together.

Example 41.2 Microscopic and Macroscopic Particles in Boxes

(A) An electron is confined between two impenetrable walls 0.200 nm apart. Determine the energy levels for the states $n = 1, 2$, and 3.

SOLUTION

Conceptualize In Figure 41.3a, imagine that the particle is an electron and the walls are very close together.

Categorize We evaluate the energy levels using an equation developed in this section, so we categorize this example as a substitution problem.

Use Equation 41.14 for the $n = 1$ state:

$$E_1 = \frac{h^2}{8m_e L^2} (1)^2 = \frac{(6.63 \times 10^{-34} \text{ J} \cdot \text{s})^2}{8(9.11 \times 10^{-31} \text{ kg})(2.00 \times 10^{-10} \text{ m})^2} = 1.51 \times 10^{-18} \text{ J} = 9.42 \text{ eV}$$

Using $E_n = n^2 E_1$, find the energies of the $n = 2$ and $n = 3$ states:

$$E_2 = (2)^2 E_1 = 4(9.42 \text{ eV}) = 37.7 \text{ eV}$$

$$E_3 = (3)^2 E_1 = 9(9.42 \text{ eV}) = 84.8 \text{ eV}$$

(B) Find the speed of the electron in the $n = 1$ state.

SOLUTION

Solve the classical expression for kinetic energy for the particle speed:

$$K = \frac{1}{2} m_e u^2 \rightarrow u = \sqrt{\frac{2K}{m_e}}$$

Recognize that the kinetic energy of the particle is equal to the system energy and substitute E_n for K :

$$(1) \quad u = \sqrt{\frac{2E_n}{m_e}}$$

Substitute numerical values from part (A):

$$u = \sqrt{\frac{2(1.51 \times 10^{-18} \text{ J})}{9.11 \times 10^{-31} \text{ kg}}} = 1.82 \times 10^6 \text{ m/s}$$

Simply placing the electron in the box results in a *minimum* speed of the electron equal to 0.6% of the speed of light!

(C) A 0.500-kg baseball is confined between two rigid walls of a stadium that can be modeled as a box of length 100 m. Calculate the minimum speed of the baseball.

41.2 continued

SOLUTION

Conceptualize In Figure 41.3a, imagine that the particle is a baseball and the walls are those of the stadium.

Categorize This part of the example is a substitution problem in which we apply a quantum approach to a macroscopic object.

Use Equation 41.14 for the $n = 1$ state:

$$E_1 = \frac{h^2}{8mL^2} (1)^2 = \frac{(6.63 \times 10^{-34} \text{ J} \cdot \text{s})^2}{8(0.500 \text{ kg})(100 \text{ m})^2} = 1.10 \times 10^{-71} \text{ J}$$

Use Equation (1) to find the speed:

$$u = \sqrt{\frac{2(1.10 \times 10^{-71} \text{ J})}{0.500 \text{ kg}}} = 6.63 \times 10^{-36} \text{ m/s}$$

This speed is so small that the object can be considered to be at rest, which is what one would expect for the minimum speed of a macroscopic object.

WHAT IF? What if a sharp line drive is hit so that the baseball is moving with a speed of 150 m/s? What is the quantum number of the state in which the baseball now resides?

Answer We expect the quantum number to be very large because the baseball is a macroscopic object.

Evaluate the kinetic energy of the baseball: $\frac{1}{2}mu^2 = \frac{1}{2}(0.500 \text{ kg})(150 \text{ m/s})^2 = 5.62 \times 10^3 \text{ J}$

From Equation 41.14, calculate the quantum number n :
$$n = \sqrt{\frac{8mL^2E_n}{h^2}} = \sqrt{\frac{8(0.500 \text{ kg})(100 \text{ m})^2(5.62 \times 10^3 \text{ J})}{(6.63 \times 10^{-34} \text{ J} \cdot \text{s})^2}} = 2.26 \times 10^{37}$$

This result is a tremendously large quantum number. As the baseball pushes air out of the way, hits the ground, and rolls to a stop, it moves through more than 10^{37} quantum states. These states are so close together in energy that we cannot observe the transitions from one state to the next. Rather, we see what appears to be a smooth variation in the speed of the ball. The quantum nature of the universe is simply not evident in the motion of macroscopic objects.

Example 41.3 The Expectation Values for the Particle in a Box

A particle of mass m is confined to a one-dimensional box between $x = 0$ and $x = L$. Find the expectation value of the position x of the particle in the state characterized by quantum number n .

SOLUTION

Conceptualize Figure 41.4b shows that the probability for the particle to be at a given location varies with position within the box. Can you predict what the expectation value of x will be from the symmetry of the wave functions?

Categorize The statement of the example categorizes the problem for us: we focus on a quantum particle in a box and on the calculation of its expectation value of x .

Analyze In Equation 41.8, the integration from $-\infty$ to ∞ reduces to the limits 0 to L because $\psi = 0$ everywhere except in the box.

Substitute Equation 41.13 into Equation 41.8 to find the expectation value for x :

$$\begin{aligned} \langle x \rangle &= \int_{-\infty}^{\infty} \psi_n^* x \psi_n dx = \int_0^L x \left[\sqrt{\frac{2}{L}} \sin\left(\frac{n\pi x}{L}\right) \right]^2 dx \\ &= \frac{2}{L} \int_0^L x \sin^2\left(\frac{n\pi x}{L}\right) dx \end{aligned}$$

continued

▶ 41.3 continued

Evaluate the integral by consulting an integral table or by mathematical integration:⁸

$$\begin{aligned}\langle x \rangle &= \frac{2}{L} \left[\frac{x^2}{4} - \frac{x \sin\left(2 \frac{n\pi x}{L}\right)}{4 \frac{n\pi}{L}} - \frac{\cos\left(2 \frac{n\pi x}{L}\right)}{8 \left(\frac{n\pi}{L}\right)^2} \right]_0^L \\ &= \frac{2}{L} \left[\frac{L^2}{4} \right] = \frac{L}{2}\end{aligned}$$

Finalize This result shows that the expectation value of x is at the center of the box for all values of n , which you would expect from the symmetry of the square of the wave functions (the probability density) about the center (Fig. 41.4b).

The $n = 2$ wave function in Figure 41.4b has a value of zero at the midpoint of the box. Can the expectation value of the particle be at a position at which the particle has zero probability of existing? Remember that the expectation value is the *average* position. Therefore, the particle is as likely to be found to the right of the midpoint as to the left, so its average position is at the midpoint even though its probability of being there is zero. As an analogy, consider a group of students for whom the average final examination score is 50%. There is no requirement that some student achieve a score of exactly 50% for the average of all students to be 50%.

Boundary Conditions on Particles in General

The discussion of the particle in a box is very similar to the discussion in Chapter 18 of standing waves on strings:

- Because the ends of the string must be nodes, the wave functions for allowed waves must be zero at the boundaries of the string. Because the particle in a box cannot exist outside the box, the allowed wave functions for the particle must be zero at the boundaries.
- The boundary conditions on the string waves lead to quantized wavelengths and frequencies of the waves. The boundary conditions on the wave function for the particle in a box lead to quantized wavelengths and frequencies of the particle.

In quantum mechanics, it is very common for particles to be subject to boundary conditions. We therefore introduce a new analysis model, the **quantum particle under boundary conditions**. In many ways, this model is similar to the waves under boundary conditions model studied in Section 18.3. In fact, the allowed wavelengths for the wave function of a particle in a box (Eq. 41.11) are identical in form to the allowed wavelengths for mechanical waves on a string fixed at both ends (Eq. 18.4).

The quantum particle under boundary conditions model *differs* in some ways from the waves under boundary conditions model:

- In most cases of quantum particles, the wave function is *not* a simple sinusoidal function like the wave function for waves on strings. Furthermore, the wave function for a quantum particle may be a complex function.
- For a quantum particle, frequency is related to energy through $E = hf$, so the quantized frequencies lead to quantized energies.
- There may be no stationary “nodes” associated with the wave function of a quantum particle under boundary conditions. Systems more complicated than the particle in a box have more complicated wave functions, and some boundary conditions may not lead to zeroes of the wave function at fixed points.

⁸To integrate this function, first replace $\sin^2(n\pi x/L)$ with $\frac{1}{2}(1 - \cos 2n\pi x/L)$ (refer to Table B.3 in Appendix B), which allows $\langle x \rangle$ to be expressed as two integrals. The second integral can then be evaluated by partial integration (Section B.7 in Appendix B).

In general,

an interaction of a quantum particle with its environment represents one or more boundary conditions, and, if the interaction restricts the particle to a finite region of space, results in quantization of the energy of the system.

Boundary conditions on quantum wave functions are related to the coordinates describing the problem. For the particle in a box, the wave function must be zero at two values of x . In the case of a three-dimensional system such as the hydrogen atom we shall discuss in Chapter 42, the problem is best presented in *spherical coordinates*. These coordinates, an extension of the plane polar coordinates introduced in Section 3.1, consist of a radial coordinate r and two angular coordinates. The generation of the wave function and application of the boundary conditions for the hydrogen atom are beyond the scope of this book. We shall, however, examine the behavior of some of the hydrogen-atom wave functions in Chapter 42.

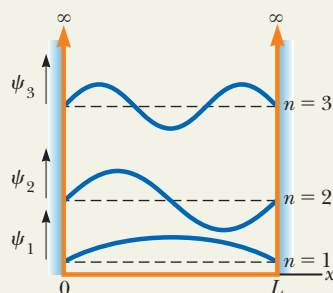
Boundary conditions on wave functions that exist for all values of x require that the wave function approach zero as $x \rightarrow \infty$ (so that the wave function can be normalized) and remain finite as $x \rightarrow 0$. One boundary condition on any angular parts of wave functions is that adding 2π radians to the angle must return the wave function to the same value because an addition of 2π results in the same angular position.

Analysis Model

Quantum Particle Under Boundary Conditions

Imagine a particle described by quantum physics that is subject to one or more boundary conditions. If the particle is restricted to a finite region of space by the boundary conditions, the energy of the system is quantized.

Associated with each quantized energy is a quantum state characterized by a wave function and a quantum number.



Examples:

- an electron in a quantum dot cannot escape, quantizing the energies of the electron (Section 41.4)
- an electron in a hydrogen atom is restricted to stay near the nucleus of the atom, quantizing the energies of the atom (Chapter 42)
- two atoms are bound to form a diatomic molecule, quantizing the energies of vibration and rotation of the molecule (Chapter 43)
- a proton is trapped in a nucleus, quantizing its energy levels (Chapter 44)

41.3 The Schrödinger Equation

In Section 34.3, we discussed a linear wave equation for electromagnetic radiation that follows from Maxwell's equations. The waves associated with particles also satisfy a wave equation. The wave equation for material particles is different from that associated with photons because material particles have a nonzero rest energy. The appropriate wave equation was developed by Schrödinger in 1926. In analyzing the behavior of a quantum system, the approach is to determine a solution to this equation and then apply the appropriate boundary conditions to the solution. This process yields the allowed wave functions and energy levels of the system under consideration. Proper manipulation of the wave function then enables one to calculate all measurable features of the system.

The Schrödinger equation as it applies to a particle of mass m confined to moving along the x axis and interacting with its environment through a potential energy function $U(x)$ is

$$-\frac{\hbar^2}{2m} \frac{d^2\psi}{dx^2} + U\psi = E\psi \quad (41.15)$$

◀ Time-independent Schrödinger equation



© INTERFOTO/Alamy

Erwin Schrödinger

Austrian Theoretical Physicist
(1887–1961)

Schrödinger is best known as one of the creators of quantum mechanics. His approach to quantum mechanics was demonstrated to be mathematically equivalent to the more abstract matrix mechanics developed by Heisenberg. Schrödinger also produced important papers in the fields of statistical mechanics, color vision, and general relativity.

where E is a constant equal to the total energy of the system (the particle and its environment). Because this equation is independent of time, it is commonly referred to as the **time-independent Schrödinger equation**. (We shall not discuss the time-dependent Schrödinger equation in this book.)

The Schrödinger equation is consistent with the principle of conservation of mechanical energy for an isolated system with no nonconservative forces acting. Problem 44 shows, both for a free particle and a particle in a box, that the first term in the Schrödinger equation reduces to the kinetic energy of the particle multiplied by the wave function. Therefore, Equation 41.15 indicates that the total energy of the system is the sum of the kinetic energy and the potential energy and that the total energy is a constant: $K + U = E = \text{constant}$.

In principle, if the potential energy function U for a system is known, one can solve Equation 41.15 and obtain the wave functions and energies for the allowed states of the system. In addition, in many cases, the wave function ψ must satisfy boundary conditions. Therefore, once we have a preliminary solution to the Schrödinger equation, we impose the following conditions to find the exact solution and the allowed energies:

- ψ must be normalizable. That is, Equation 41.7 must be satisfied.
- ψ must go to 0 as $x \rightarrow \pm\infty$ and remain finite as $x \rightarrow 0$.
- ψ must be continuous in x and be single-valued everywhere; solutions to Equation 41.15 in different regions must join smoothly at the boundaries between the regions.
- $d\psi/dx$ must be finite, continuous, and single-valued everywhere for finite values of U . If $d\psi/dx$ were not continuous, we would not be able to evaluate the second derivative $d^2\psi/dx^2$ in Equation 41.15 at the point of discontinuity.

The task of solving the Schrödinger equation may be very difficult, depending on the form of the potential energy function. As it turns out, the Schrödinger equation is extremely successful in explaining the behavior of atomic and nuclear systems, whereas classical physics fails to explain this behavior. Furthermore, when quantum mechanics is applied to macroscopic objects, the results agree with classical physics.

The Particle in a Box Revisited

To see how the quantum particle under boundary conditions model is applied to a problem, let's return to our particle in a one-dimensional box of length L (see Fig. 41.3) and analyze it with the Schrödinger equation. Figure 41.3b is the potential-energy diagram that describes this problem. Potential-energy diagrams are a useful representation for understanding and solving problems with the Schrödinger equation.

Because of the shape of the curve in Figure 41.3b, the particle in a box is sometimes said to be in a **square well**,⁹ where a **well** is an upward-facing region of the curve in a potential-energy diagram. (A downward-facing region is called a *barrier*, which we investigate in Section 41.5.) Figure 41.3b shows an infinite square well.

In the region $0 < x < L$, where $U = 0$, we can express the Schrödinger equation in the form

$$\frac{d^2\psi}{dx^2} = -\frac{2mE}{\hbar^2}\psi = -k^2\psi \quad (41.16)$$

where

$$k = \frac{\sqrt{2mE}}{\hbar}$$

Pitfall Prevention 41.3

Potential Wells A potential well such as that in Figure 41.3b is a graphical representation of energy, not a pictorial representation, so you would not see this shape if you were able to observe the situation. A particle moves *only horizontally* at a fixed vertical position in a potential-energy diagram, representing the conserved energy of the system of the particle and its environment.

⁹It is called a square well even if it has a rectangular shape in a potential-energy diagram.

The solution to Equation 41.16 is a function ψ whose second derivative is the negative of the same function multiplied by a constant k^2 . Both the sine and cosine functions satisfy this requirement. Therefore, the most general solution to the equation is a linear combination of both solutions:

$$\psi(x) = A \sin kx + B \cos kx$$

where A and B are constants that are determined by the boundary and normalization conditions.

The first boundary condition on the wave function is that $\psi(0) = 0$:

$$\psi(0) = A \sin 0 + B \cos 0 = 0 + B = 0$$

which means that $B = 0$. Therefore, our solution reduces to

$$\psi(x) = A \sin kx$$

The second boundary condition, $\psi(L) = 0$, when applied to the reduced solution gives

$$\psi(L) = A \sin kL = 0$$

This equation could be satisfied by setting $A = 0$, but that would mean that $\psi = 0$ everywhere, which is not a valid wave function. The boundary condition is also satisfied if kL is an integral multiple of π , that is, if $kL = n\pi$, where n is an integer. Substituting $k = \sqrt{2mE}/\hbar$ into this expression gives

$$kL = \frac{\sqrt{2mE}}{\hbar} L = n\pi$$

Each value of the integer n corresponds to a quantized energy that we call E_n . Solving for the allowed energies E_n gives

$$E_n = \left(\frac{\hbar^2}{8mL^2} \right) n^2 \quad (41.17)$$

which are identical to the allowed energies in Equation 41.14.

Substituting the values of k in the wave function, the allowed wave functions $\psi_n(x)$ are given by

$$\psi_n(x) = A \sin \left(\frac{n\pi x}{L} \right) \quad (41.18)$$

which is the wave function (Eq. 41.12) used in our initial discussion of the particle in a box.

41.4 A Particle in a Well of Finite Height

Now consider a particle in a *finite* potential well, that is, a system having a potential energy that is zero when the particle is in the region $0 < x < L$ and a finite value U when the particle is outside this region as in Figure 41.6. Classically, if the total energy E of the system is less than U , the particle is permanently bound in the potential well. If the particle were outside the well, its kinetic energy would have to be negative, which is an impossibility. According to quantum mechanics, however, a finite probability exists that the particle can be found outside the well even if $E < U$. That is, the wave function ψ is generally nonzero outside the well—regions I and III in Figure 41.6—so the probability density $|\psi|^2$ is also nonzero in these regions. Although this notion may be uncomfortable to accept, the uncertainty principle indicates that the energy of the system is uncertain. This uncertainty allows the particle to be outside the well as long as the apparent violation of conservation of energy does not exist in any measurable way.

In region II, where $U = 0$, the allowed wave functions are again sinusoidal because they represent solutions of Equation 41.16. The boundary conditions, however,

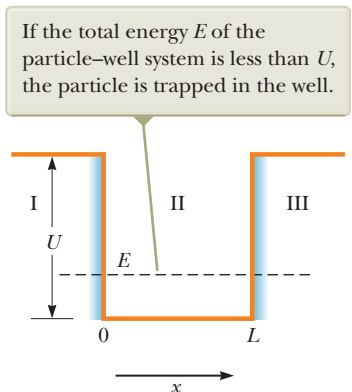


Figure 41.6 Potential-energy diagram of a well of finite height U and length L .

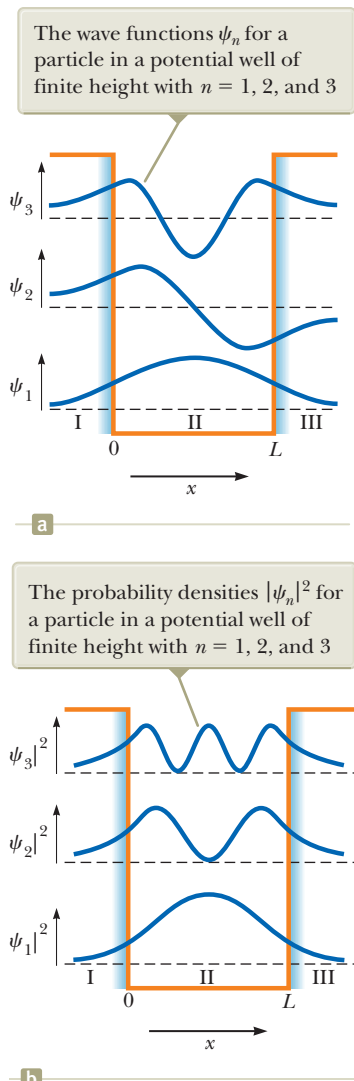


Figure 41.7 The first three allowed states for a particle in a potential well of finite height. The states are shown superimposed on the potential energy function of Figure 41.6. The wave functions and probability densities are plotted vertically from separate axes that are offset vertically for clarity. The positions of these axes on the potential energy function suggest the relative energies of the states.

no longer require that ψ be zero at the ends of the well, as was the case with the infinite square well.

The Schrödinger equation for regions I and III may be written

$$\frac{d^2\psi}{dx^2} = \frac{2m(U - E)}{\hbar^2} \psi \quad (41.19)$$

Because $U > E$, the coefficient of ψ on the right-hand side is necessarily positive. Therefore, we can express Equation 41.19 as

$$\frac{d^2\psi}{dx^2} = C^2\psi \quad (41.20)$$

where $C^2 = 2m(U - E)/\hbar^2$ is a positive constant in regions I and III. As you can verify by substitution, the general solution of Equation 41.20 is

$$\psi = Ae^{Cx} + Be^{-Cx} \quad (41.21)$$

where A and B are constants.

We can use this general solution as a starting point for determining the appropriate solution for regions I and III. The solution must remain finite as $x \rightarrow \pm\infty$. Therefore, in region I, where $x < 0$, the function ψ cannot contain the term Be^{-Cx} . This requirement is handled by taking $B = 0$ in this region to avoid an infinite value for ψ for large negative values of x . Likewise, in region III, where $x > L$, the function ψ cannot contain the term Ae^{Cx} . This requirement is handled by taking $A = 0$ in this region to avoid an infinite value for ψ for large positive x values. Hence, the solutions in regions I and III are

$$\begin{aligned} \psi_{\text{I}} &= Ae^{Cx} & \text{for } x < 0 \\ \psi_{\text{III}} &= Be^{-Cx} & \text{for } x > L \end{aligned}$$

In region II, the wave function is sinusoidal and has the general form

$$\psi_{\text{II}}(x) = F \sin kx + G \cos kx$$

where F and G are constants.

These results show that the wave functions outside the potential well (where classical physics forbids the presence of the particle) decay exponentially with distance. At large negative x values, ψ_{I} approaches zero; at large positive x values, ψ_{III} approaches zero. These functions, together with the sinusoidal solution in region II, are shown in Figure 41.7a for the first three energy states. In evaluating the complete wave function, we impose the following boundary conditions:

$$\begin{aligned} \psi_{\text{I}} &= \psi_{\text{II}} & \text{and} & & \frac{d\psi_{\text{I}}}{dx} &= \frac{d\psi_{\text{II}}}{dx} & \text{at } x = 0 \\ \psi_{\text{II}} &= \psi_{\text{III}} & \text{and} & & \frac{d\psi_{\text{II}}}{dx} &= \frac{d\psi_{\text{III}}}{dx} & \text{at } x = L \end{aligned}$$

These four boundary conditions and the normalization condition (Eq. 41.7) are sufficient to determine the four constants A , B , F , and G and the allowed values of the energy E . Figure 41.7b plots the probability densities for these states. In each case, the wave functions inside and outside the potential well join smoothly at the boundaries.

The notion of trapping particles in potential wells is used in the burgeoning field of **nanotechnology**, which refers to the design and application of devices having dimensions ranging from 1 to 100 nm. The fabrication of these devices often involves manipulating single atoms or small groups of atoms to form very tiny structures or mechanisms.

One area of nanotechnology of interest to researchers is the **quantum dot**, a small region that is grown in a silicon crystal and acts as a potential well. This region can trap electrons into states with quantized energies. The wave functions

for a particle in a quantum dot look similar to those in Figure 41.7a if L is on the order of nanometers. The storage of binary information using quantum dots is an active field of research. A simple binary scheme would involve associating a one with a quantum dot containing an electron and a zero with an empty dot. Other schemes involve cells of multiple dots such that arrangements of electrons among the dots correspond to ones and zeroes. Several research laboratories are studying the properties and potential applications of quantum dots. Information should be forthcoming from these laboratories at a steady rate in the next few years.

41.5 Tunneling Through a Potential Energy Barrier

Consider the potential energy function shown in Figure 41.8. In this situation, the potential energy has a constant value of U in the region of width L and is zero in all other regions.¹⁰ A potential energy function of this shape is called a **square barrier**, and U is called the **barrier height**. A very interesting and peculiar phenomenon occurs when a moving particle encounters such a barrier of finite height and width. Suppose a particle of energy $E < U$ is incident on the barrier from the left (Fig. 41.8). Classically, the particle is reflected by the barrier. If the particle were located in region II, its kinetic energy would be negative, which is not classically allowed. Consequently, region II and therefore region III are both classically *forbidden* to the particle incident from the left. According to quantum mechanics, however, all regions are accessible to the particle, regardless of its energy. (Although all regions are accessible, the probability of the particle being in a classically forbidden region is very low.) According to the uncertainty principle, the particle could be within the barrier as long as the time interval during which it is in the barrier is short and consistent with Equation 40.26. If the barrier is relatively narrow, this short time interval can allow the particle to pass through the barrier.

Let's approach this situation using a mathematical representation. The Schrödinger equation has valid solutions in all three regions. The solutions in regions I and III are sinusoidal like Equation 41.18. In region II, the solution is exponential like Equation 41.21. Applying the boundary conditions that the wave functions in the three regions and their derivatives must join smoothly at the boundaries, a full solution, such as the one represented by the curve in Figure 41.8, can be found. Because the probability of locating the particle is proportional to $|\psi|^2$, the probability of finding the particle beyond the barrier in region III is nonzero. This result is in complete disagreement with classical physics. The movement of the particle to the far side of the barrier is called **tunneling** or **barrier penetration**.

The probability of tunneling can be described with a **transmission coefficient** T and a **reflection coefficient** R . The transmission coefficient represents the probability that the particle penetrates to the other side of the barrier, and the reflection coefficient is the probability that the particle is reflected by the barrier. Because the incident particle is either reflected or transmitted, we require that $T + R = 1$. An approximate expression for the transmission coefficient that is obtained in the case of $T \ll 1$ (a very wide barrier or a very high barrier, that is, $U \gg E$) is

$$T \approx e^{-2CL} \quad (41.22)$$

where

$$C = \frac{\sqrt{2m(U - E)}}{\hbar} \quad (41.23)$$

This quantum model of barrier penetration and specifically Equation 41.22 show that T can be nonzero. That the phenomenon of tunneling is observed experimentally provides further confidence in the principles of quantum physics.

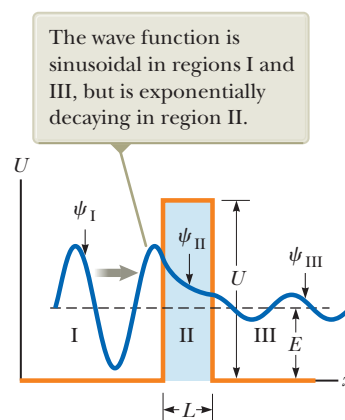


Figure 41.8 Wave function ψ for a particle incident from the left on a barrier of height U and width L . The wave function is plotted vertically from an axis positioned at the energy of the particle.

Pitfall Prevention 41.4

"Height" on an Energy Diagram The word *height* (as in *barrier height*) refers to an energy in discussions of barriers in potential-energy diagrams. For example, we might say the height of the barrier is 10 eV. On the other hand, the barrier *width* refers to the traditional usage of such a word and is an actual physical length measurement between the two vertical sides of the barrier.

¹⁰It is common in physics to refer to L as the *length* of a well but the *width* of a barrier.

- Quick Quiz 41.4** Which of the following changes would increase the probability of transmission of a particle through a potential barrier? (You may choose more than one answer.) (a) decreasing the width of the barrier (b) increasing the width of the barrier (c) decreasing the height of the barrier (d) increasing the height of the barrier (e) decreasing the kinetic energy of the incident particle (f) increasing the kinetic energy of the incident particle

Example 41.4 Transmission Coefficient for an Electron

A 30-eV electron is incident on a square barrier of height 40 eV.

(A) What is the probability that the electron tunnels through the barrier if its width is 1.0 nm?

SOLUTION

Conceptualize Because the particle energy is smaller than the height of the potential barrier, we expect the electron to reflect from the barrier with a probability of 100% according to classical physics. Because of the tunneling phenomenon, however, there is a finite probability that the particle can appear on the other side of the barrier.

Categorize We evaluate the probability using an equation developed in this section, so we categorize this example as a substitution problem.

Evaluate the quantity $U - E$ that appears in Equation 41.23:

$$U - E = 40 \text{ eV} - 30 \text{ eV} = 10 \text{ eV} \left(\frac{1.6 \times 10^{-19} \text{ J}}{1 \text{ eV}} \right) = 1.6 \times 10^{-18} \text{ J}$$

Evaluate the quantity $2CL$ using Equation 41.23:

$$(1) \quad 2CL = 2 \frac{\sqrt{2(9.11 \times 10^{-31} \text{ kg})(1.6 \times 10^{-18} \text{ J})}}{1.055 \times 10^{-34} \text{ J} \cdot \text{s}} (1.0 \times 10^{-9} \text{ m}) = 32.4$$

From Equation 41.22, find the probability of tunneling through the barrier:

$$T \approx e^{-2CL} = e^{-32.4} = 8.5 \times 10^{-15}$$

(B) What is the probability that the electron tunnels through the barrier if its width is 0.10 nm?

SOLUTION

In this case, the width L in Equation (1) is one-tenth as large, so evaluate the new value of $2CL$:

$$2CL = (0.1)(32.4) = 3.24$$

From Equation 41.22, find the new probability of tunneling through the barrier:

$$T \approx e^{-2CL} = e^{-3.24} = 0.039$$

In part (A), the electron has approximately 1 chance in 10^{14} of tunneling through the barrier. In part (B), however, the electron has a much higher probability (3.9%) of penetrating the barrier. Therefore, reducing the width of the barrier by only one order of magnitude increases the probability of tunneling by about 12 orders of magnitude!

41.6 Applications of Tunneling

As we have seen, tunneling is a quantum phenomenon, a manifestation of the wave nature of matter. Many examples exist (on the atomic and nuclear scales) for which tunneling is very important.

Alpha Decay

One form of radioactive decay is the emission of alpha particles (the nuclei of helium atoms) by unstable, heavy nuclei (Chapter 44). To escape from the nucleus, an alpha particle must penetrate a barrier whose height is several times larger than

the energy of the nucleus–alpha particle system as shown in Figure 41.9. The barrier results from a combination of the attractive nuclear force (discussed in Chapter 44) and the Coulomb repulsion (discussed in Chapter 23) between the alpha particle and the rest of the nucleus. Occasionally, an alpha particle tunnels through the barrier, which explains the basic mechanism for this type of decay and the large variations in the mean lifetimes of various radioactive nuclei.

Figure 41.8 shows the wave function of a particle tunneling through a barrier in one dimension. A similar wave function having spherical symmetry describes the barrier penetration of an alpha particle leaving a radioactive nucleus. The wave function exists both inside and outside the nucleus, and its amplitude is constant in time. In this way, the wave function correctly describes the small but constant probability that the nucleus will decay. The moment of decay cannot be predicted. In general, quantum mechanics implies that the future is indeterminate. This feature is in contrast to classical mechanics, from which the trajectory of an object can be calculated to arbitrarily high precision from precise knowledge of its initial position and velocity and of the forces exerted on it. Do not think that the future is undetermined simply because we have incomplete information about the present. The wave function contains all the information about the state of a system. Sometimes precise predictions can be made, such as the energy of a bound system, but sometimes only probabilities can be calculated about the future. The fundamental laws of nature are probabilistic. Therefore, it appears that Einstein’s famous statement about quantum mechanics, “God does not roll dice,” was wrong.

A radiation detector can be used to show that a nucleus decays by emitting a particle at a particular moment and in a particular direction. To point out the contrast between this experimental result and the wave function describing it, Schrödinger imagined a box containing a cat, a radioactive sample, a radiation counter, and a vial of poison. When a nucleus in the sample decays, the counter triggers the administration of lethal poison to the cat. Quantum mechanics correctly predicts the probability of finding the cat dead when the box is opened. Before the box is opened, does the cat have a wave function describing it as fractionally dead, with some chance of being alive?

This question is under continuing investigation, never with actual cats but sometimes with interference experiments building upon the experiment described in Section 40.7. Does the act of measurement change the system from a probabilistic to a definite state? When a particle emitted by a radioactive nucleus is detected at one particular location, does the wave function describing the particle drop instantaneously to zero everywhere else in the Universe? (Einstein called such a state change a “spooky action at a distance.”) Is there a fundamental difference between a quantum system and a macroscopic system? The answers to these questions are unknown.

Nuclear Fusion

The basic reaction that powers the Sun and, indirectly, almost everything else in the solar system is fusion, which we shall study in Chapter 45. In one step of the process that occurs at the core of the Sun, protons must approach one another to within such a small distance that they fuse and form a deuterium nucleus. (See Section 45.4.) According to classical physics, these protons cannot overcome and penetrate the barrier caused by their mutual electrical repulsion. Quantum mechanically, however, the protons are able to tunnel through the barrier and fuse together.

Scanning Tunneling Microscopes

The scanning tunneling microscope (STM) enables scientists to obtain highly detailed images of surfaces at resolutions comparable to the size of a *single atom*. Figure 41.10 (page 1284), showing the surface of a piece of graphite, demonstrates what STMs can do. What makes this image so remarkable is that its resolution is

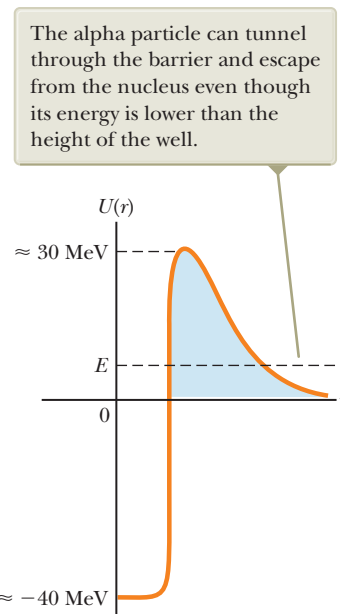


Figure 41.9 The potential well for an alpha particle in a nucleus.

The contours seen here represent the ring-like arrangement of individual carbon atoms on the crystal surface.

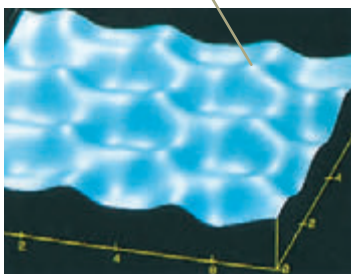


Photo courtesy of Paul K. Hansma, University of California, Santa Barbara

Figure 41.10 The surface of graphite as “viewed” with a scanning tunneling microscope. This type of microscope enables scientists to see details with a lateral resolution of about 0.2 nm and a vertical resolution of 0.001 nm.

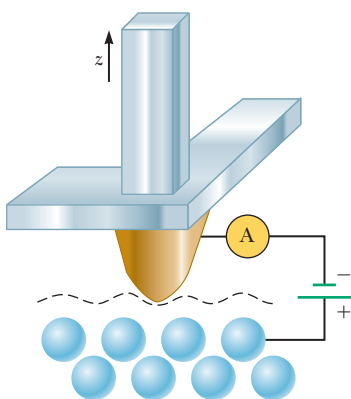


Figure 41.11 Schematic view of a scanning tunneling microscope. A scan of the tip over the sample can reveal surface contours down to the atomic level. An STM image is composed of a series of scans displaced laterally from one another. (Based on a drawing from P. K. Hansma, V. B. Elings, O. Marti, and C. Bracker, *Science* **242**:209, 1988. © 1988 by the AAAS.)

approximately 0.2 nm. For an optical microscope, the resolution is limited by the wavelength of the light used to make the image. Therefore, an optical microscope has a resolution no better than 200 nm, about half the wavelength of visible light, and so could never show the detail displayed in Figure 41.10.

Scanning tunneling microscopes achieve such high resolution by using the basic idea shown in Figure 41.11. An electrically conducting probe with a very sharp tip is brought near the surface to be studied. The empty space between tip and surface represents the “barrier” we have been discussing, and the tip and surface are the two walls of the “potential well.” Because electrons obey quantum rules rather than Newtonian rules, they can “tunnel” across the barrier of empty space. If a voltage is applied between surface and tip, electrons in the atoms of the surface material can tunnel preferentially from surface to tip to produce a tunneling current. In this way, the tip samples the distribution of electrons immediately above the surface.

In the empty space between tip and surface, the electron wave function falls off exponentially (see region II in Fig. 41.8 and Example 41.4). For tip-to-surface distances $z > 1$ nm (that is, beyond a few atomic diameters), essentially no tunneling takes place. This exponential behavior causes the current of electrons tunneling from surface to tip to depend very strongly on z . By monitoring the tunneling current as the tip is scanned over the surface, scientists obtain a sensitive measure of the topography of the electron distribution on the surface. The result of this scan is used to make images like that in Figure 41.10. In this way, the STM can measure the height of surface features to within 0.001 nm, approximately 1/100 of an atomic diameter!

You can appreciate the sensitivity of STMs by examining Figure 41.10. Of the six carbon atoms in each ring, three appear lower than the other three. In fact, all six atoms are at the same height, but all have slightly different electron distributions. The three atoms that appear lower are bonded to other carbon atoms directly beneath them in the underlying atomic layer; as a result, their electron distributions, which are responsible for the bonding, extend downward beneath the surface. The atoms in the surface layer that appear higher do not lie directly over subsurface atoms and hence are not bonded to any underlying atoms. For these higher-appearing atoms, the electron distribution extends upward into the space above the surface. Because STMs map the topography of the electron distribution, this extra electron density makes these atoms appear higher in Figure 41.10.

The STM has one serious limitation: Its operation depends on the electrical conductivity of the sample and the tip. Unfortunately, most materials are not electrically conductive at their surfaces. Even metals, which are usually excellent electrical conductors, are covered with nonconductive oxides. A newer microscope, the atomic force microscope, or AFM, overcomes this limitation.

Resonant Tunneling Devices

Let’s expand on the quantum-dot discussion in Section 41.4 by exploring the **resonant tunneling device**. Figure 41.12a shows the physical construction of such a device. The island of gallium arsenide in the center is a quantum dot located between two barriers formed from the thin extensions of aluminum arsenide. Figure 41.12b shows both the potential barriers encountered by electrons incident from the left and the quantized energy levels in the quantum dot. This situation differs from the one shown in Figure 41.8 in that there are quantized energy levels on the right of the first barrier. In Figure 41.8, an electron that tunnels through the barrier is considered a free particle and can have any energy. In contrast, the second barrier in Figure 41.12b imposes boundary conditions on the particle and quantizes its energy in the quantum dot. In Figure 41.12b, as the electron with the energy shown encounters the first barrier, it has no matching energy levels available on the right side of the barrier, which greatly reduces the probability of tunneling.

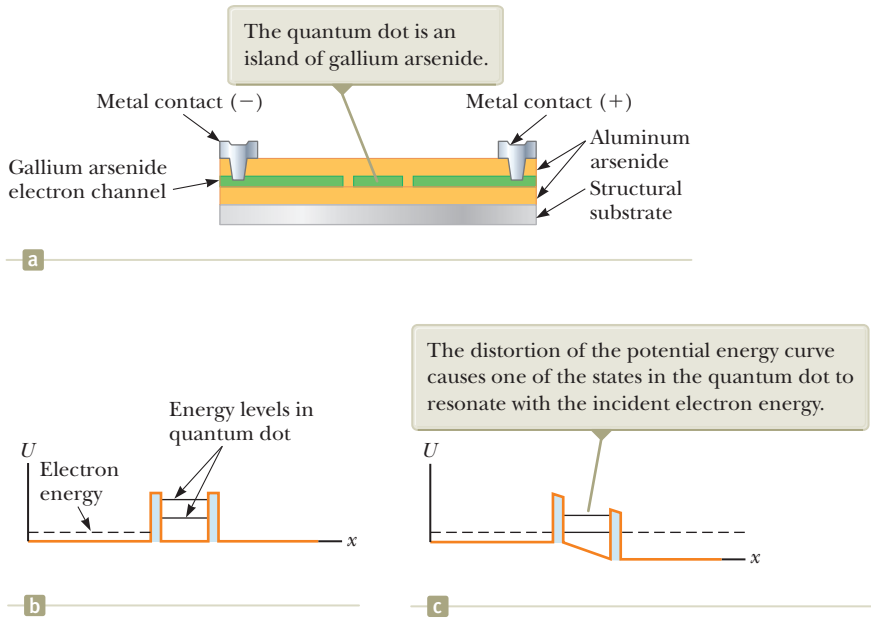


Figure 41.12 (a) The physical structure of a resonant tunneling device. (b) A potential-energy diagram showing the double barrier representing the walls of the quantum dot. (c) A voltage is applied across the device.

Figure 41.12c shows the effect of applying a voltage: the potential decreases with position as we move to the right across the device. The deformation of the potential barrier results in an energy level in the quantum dot coinciding with the energy of the incident electrons. This “resonance” of energies gives the device its name. When the voltage is applied, the probability of tunneling increases tremendously and the device carries current. In this manner, the device can be used as a very fast switch on a nanotechnological scale.

Resonant Tunneling Transistors

Figure 41.13a shows the addition of a gate electrode at the top of the resonant tunneling device over the quantum dot. This electrode turns the device into a **resonant**

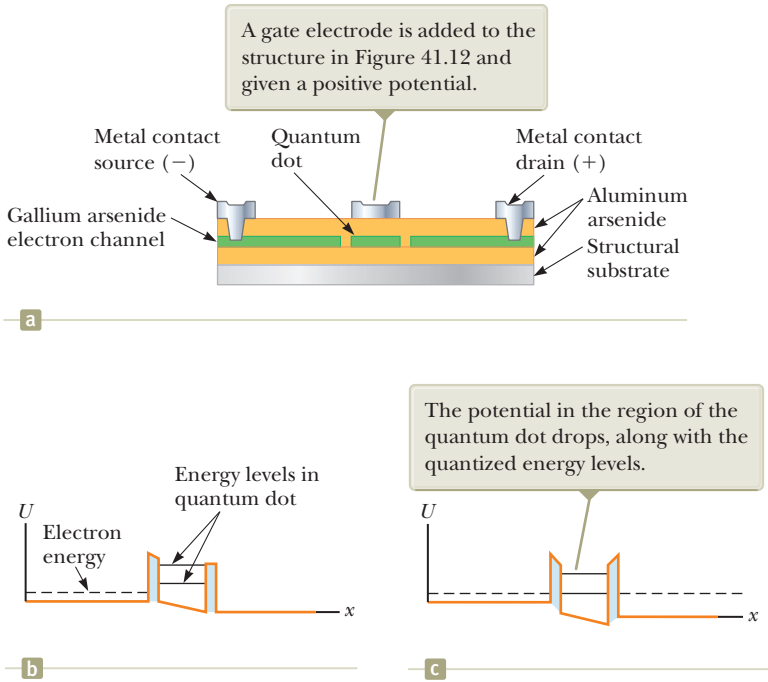


Figure 41.13 (a) A resonant tunneling transistor. (b) A potential-energy diagram showing the double barrier representing the walls of the quantum dot. (c) A voltage is applied to the gate electrode.

tunneling transistor. The basic function of a transistor is amplification, converting a small varying voltage into a large varying voltage. Figure 41.13b, representing the potential-energy diagram for the tunneling transistor, has a slope at the bottom of the quantum dot due to the differing voltages at the source and drain electrodes. In this configuration, there is no resonance between the electron energies outside the quantum dot and the quantized energies within the dot. By applying a small voltage to the gate electrode as in Figure 41.13c, the quantized energies can be brought into resonance with the electron energy outside the well and resonant tunneling occurs. The resulting current causes a voltage across an external resistor that is much larger than that of the gate voltage; hence, the device amplifies the input signal to the gate electrode.

41.7 The Simple Harmonic Oscillator

Consider a particle that is subject to a linear restoring force $F = -kx$, where k is a constant and x is the position of the particle relative to equilibrium ($x = 0$). The classical description of such a situation is provided by the particle in simple harmonic motion analysis model, which was discussed in Chapter 15. The potential energy of the system is, from Equation 15.20,

$$U = \frac{1}{2}kx^2 = \frac{1}{2}m\omega^2x^2$$

where the angular frequency of vibration is $\omega = \sqrt{k/m}$. Classically, if the particle is displaced from its equilibrium position and released, it oscillates between the points $x = -A$ and $x = A$, where A is the amplitude of the motion. Furthermore, its total energy E is, from Equation 15.21,

$$E = K + U = \frac{1}{2}kA^2 = \frac{1}{2}m\omega^2A^2$$

In the classical model, any value of E is allowed, including $E = 0$, which is the total energy when the particle is at rest at $x = 0$.

Let's investigate how the simple harmonic oscillator is treated from a quantum point of view. The Schrödinger equation for this problem is obtained by substituting $U = \frac{1}{2}m\omega^2x^2$ into Equation 41.15:

$$-\frac{\hbar^2}{2m} \frac{d^2\psi}{dx^2} + \frac{1}{2}m\omega^2x^2\psi = E\psi \quad (41.24)$$

The mathematical technique for solving this equation is beyond the level of this book; nonetheless, it is instructive to guess at a solution. We take as our guess the following wave function:

$$\psi = Be^{-Cx^2} \quad (41.25)$$

Substituting this function into Equation 41.24 shows that it is a satisfactory solution to the Schrödinger equation, provided that

$$C = \frac{m\omega}{2\hbar} \quad \text{and} \quad E = \frac{1}{2}\hbar\omega$$

It turns out that the solution we have guessed corresponds to the ground state of the system, which has an energy $\frac{1}{2}\hbar\omega$. Because $C = m\omega/2\hbar$, it follows from Equation 41.25 that the wave function for this state is

$$\psi = Be^{-(m\omega/2\hbar)x^2} \quad (41.26)$$

where B is a constant to be determined from the normalization condition. This result is but one solution to Equation 41.24. The remaining solutions that describe the excited states are more complicated, but all solutions include the exponential factor e^{-Cx^2} .

Wave function for the ground state of a simple harmonic oscillator

The energy levels of a harmonic oscillator are quantized as we would expect because the oscillating particle is bound to stay near $x = 0$. The energy of a state having an arbitrary quantum number n is

$$E_n = \left(n + \frac{1}{2}\right)\hbar\omega \quad n = 0, 1, 2, \dots \quad (41.27)$$

The state $n = 0$ corresponds to the ground state, whose energy is $E_0 = \frac{1}{2}\hbar\omega$; the state $n = 1$ corresponds to the first excited state, whose energy is $E_1 = \frac{3}{2}\hbar\omega$; and so on. The energy-level diagram for this system is shown in Figure 41.14. The separations between adjacent levels are equal and given by

$$\Delta E = \hbar\omega \quad (41.28)$$

Notice that the energy levels for the harmonic oscillator in Figure 41.14 are equally spaced, just as Planck proposed for the oscillators in the walls of the cavity that was used in the model for blackbody radiation in Section 40.1. Planck's Equation 40.4 for the energy levels of the oscillators differs from Equation 41.27 only in the term $\frac{1}{2}$ added to n . This additional term does not affect the energy emitted in a transition, given by Equation 40.5, which is equivalent to Equation 41.28. That Planck generated these concepts without the benefit of the Schrödinger equation is testimony to his genius.

The levels are equally spaced, with separation $\hbar\omega$. The ground-state energy is $E_0 = \frac{1}{2}\hbar\omega$.

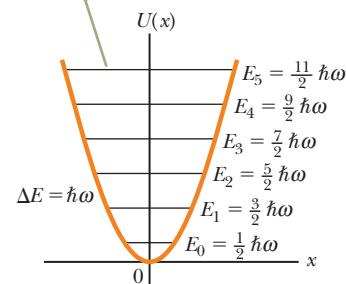


Figure 41.14 Energy-level diagram for a simple harmonic oscillator, superimposed on the potential energy function.

Example 41.5 Molar Specific Heat of Hydrogen Gas

In Figure 21.6 (Section 21.3), which shows the molar specific heat of hydrogen as a function of temperature, vibration does not contribute to the molar specific heat at room temperature. Explain why, modeling the hydrogen molecule as a simple harmonic oscillator. The effective spring constant for the bond in the hydrogen molecule is 573 N/m.

SOLUTION

Conceptualize Imagine the only mode of vibration available to a diatomic molecule. This mode (shown in Fig. 21.5c) consists of the two atoms always moving in opposite directions with equal speeds.

Categorize We categorize this example as a quantum harmonic oscillator problem, with the molecule modeled as a two-particle system.

Analyze The motion of the particles relative to the center of mass can be analyzed by considering the oscillation of a single particle with reduced mass μ . (See Problem 40.)

Use the result of Problem 40 to evaluate the reduced mass of the hydrogen molecule, in which the masses of the two particles are the same:

$$\mu = \frac{m_1 m_2}{m_1 + m_2} = \frac{m^2}{2m} = \frac{1}{2}m$$

Using Equation 41.28, calculate the energy necessary to excite the molecule from its ground vibrational state to its first excited vibrational state:

$$\Delta E = \hbar\omega = \hbar\sqrt{\frac{k}{\mu}} = \hbar\sqrt{\frac{k}{\frac{1}{2}m}} = \hbar\sqrt{\frac{2k}{m}}$$

Substitute numerical values, noting that m is the mass of a hydrogen atom:

$$\Delta E = (1.055 \times 10^{-34} \text{ J} \cdot \text{s}) \sqrt{\frac{2(573 \text{ N/m})}{1.67 \times 10^{-27} \text{ kg}}} = 8.74 \times 10^{-20} \text{ J}$$

Set this energy equal to $\frac{3}{2}k_B T$ from Equation 21.19 and find the temperature at which the average molecular translational kinetic energy is equal to that required to excite the first vibrational state of the molecule:

$$\begin{aligned} \frac{3}{2}k_B T &= \Delta E \\ T &= \frac{2}{3} \left(\frac{\Delta E}{k_B} \right) = \frac{2}{3} \left(\frac{8.74 \times 10^{-20} \text{ J}}{1.38 \times 10^{-23} \text{ J/K}} \right) = 4.22 \times 10^3 \text{ K} \end{aligned}$$

Finalize The temperature of the gas must be more than 4 000 K for the translational kinetic energy to be comparable to the energy required to excite the first vibrational state. This excitation energy must come from collisions between

continued

41.5 continued

molecules, so if the molecules do not have sufficient translational kinetic energy, they cannot be excited to the first vibrational state and vibration does not contribute to the molar specific heat. Hence, the curve in Figure 21.6 does not rise to a value corresponding to the contribution of vibration until the hydrogen gas has been raised to thousands of kelvins.

Figure 21.6 shows that rotational energy levels must be more closely spaced in energy than vibrational levels because they are excited at a lower temperature than the vibrational levels. The translational energy levels are those of a particle in a three-dimensional box, where the box is the container holding the gas. These levels are given by an expression similar to Equation 41.14. Because the box is macroscopic in size, L is very large and the energy levels are very close together. In fact, they are so close together that translational energy levels are excited at the temperature at which liquid hydrogen becomes a gas shown in Figure 21.6.

Summary

Definitions

The **wave function** Ψ for a system is a mathematical function that can be written as a product of a space function ψ for one particle of the system and a complex time function:

$$\Psi(\vec{r}_1, \vec{r}_2, \vec{r}_3, \dots, \vec{r}_j, \dots, t) = \psi(\vec{r}_j) e^{-i\omega t} \quad (41.2)$$

where $\omega (= 2\pi f)$ is the angular frequency of the wave function and $i = \sqrt{-1}$. The wave function contains within it all the information that can be known about the particle.

The measured position x of a particle, averaged over many trials, is called the **expectation value** of x and is defined by

$$\langle x \rangle \equiv \int_{-\infty}^{\infty} \psi^* x \psi dx \quad (41.8)$$

Concepts and Principles

In quantum mechanics, a particle in a system can be represented by a wave function $\psi(x, y, z)$. The probability per unit volume (or probability density) that a particle will be found at a point is $|\psi|^2 = \psi^* \psi$, where ψ^* is the complex conjugate of ψ . If the particle is confined to moving along the x axis, the probability that it is located in an interval dx is $|\psi|^2 dx$. Furthermore, the sum of all these probabilities over all values of x must be 1:

$$\int_{-\infty}^{\infty} |\psi|^2 dx = 1 \quad (41.7)$$

This expression is called the **normalization condition**.

If a particle of mass m is confined to moving in a one-dimensional box of length L whose walls are impenetrable, then ψ must be zero at the walls and outside the box. The wave functions for this system are given by

$$\psi(x) = A \sin\left(\frac{n\pi x}{L}\right) \quad n = 1, 2, 3, \dots \quad (41.12)$$

where A is the maximum value of ψ . The allowed states of a particle in a box have quantized energies given by

$$E_n = \left(\frac{\hbar^2}{8mL^2}\right)n^2 \quad n = 1, 2, 3, \dots \quad (41.14)$$

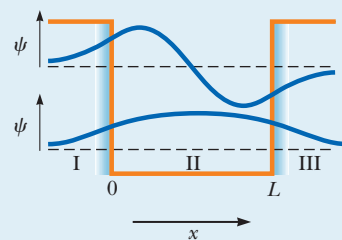
The wave function for a system must satisfy the **Schrödinger equation**. The time-independent Schrödinger equation for a particle confined to moving along the x axis is

$$-\frac{\hbar^2}{2m} \frac{d^2\psi}{dx^2} + U\psi = E\psi \quad (41.15)$$

where U is the potential energy of the system and E is the total energy.

Analysis Models for Problem Solving

Quantum Particle Under Boundary Conditions. An interaction of a quantum particle with its environment represents one or more boundary conditions. If the interaction restricts the particle to a finite region of space, the energy of the system is quantized. All wave functions must satisfy the following four boundary conditions: (1) $\psi(x)$ must remain finite as x approaches 0, (2) $\psi(x)$ must approach zero as x approaches $\pm\infty$, (3) $\psi(x)$ must be continuous for all values of x , and (4) $d\psi/dx$ must be continuous for all finite values of $U(x)$. If the solution to Equation 41.15 is piecewise, conditions (3) and (4) must be applied at the boundaries between regions of x in which Equation 41.15 has been solved.



Objective Questions

1. denotes answer available in *Student Solutions Manual/Study Guide*

- A beam of quantum particles with kinetic energy 2.00 eV is reflected from a potential barrier of small width and original height 3.00 eV. How does the fraction of the particles that are reflected change as the barrier height is reduced to 2.01 eV? (a) It increases. (b) It decreases. (c) It stays constant at zero. (d) It stays constant at 1. (e) It stays constant with some other value.
- A quantum particle of mass m_1 is in a square well with infinitely high walls and length 3 nm. Rank the situations (a) through (e) according to the particle's energy from highest to lowest, noting any cases of equality. (a) The particle of mass m_1 is in the ground state of the well. (b) The same particle is in the $n = 2$ excited state of the same well. (c) A particle with mass $2m_1$ is in the ground state of the same well. (d) A particle of mass m_1 in the ground state of the same well, and the uncertainty principle has become inoperative; that is, Planck's constant has been reduced to zero. (e) A particle of mass m_1 is in the ground state of a well of length 6 nm.
- Is each one of the following statements (a) through (e) true or false for an electron? (a) It is a quantum particle, behaving in some experiments like a classical particle and in some experiments like a classical wave. (b) Its rest energy is zero. (c) It carries energy in its motion. (d) It carries momentum in its motion. (e) Its motion is described by a wave function that has a wavelength and satisfies a wave equation.
- Is each one of the following statements (a) through (e) true or false for a photon? (a) It is a quantum particle, behaving in some experiments like a classical particle and in some experiments like a classical wave. (b) Its rest energy is zero. (c) It carries energy in its motion. (d) It carries momentum in its motion. (e) Its motion is described by a wave function that has a wavelength and satisfies a wave equation.
- A particle in a rigid box of length L is in the first excited state for which $n = 2$ (Fig. OQ41.5). Where is the particle most likely to be found? (a) At the center of the box. (b) At either end of the box. (c) All points in the box are equally likely. (d) One-fourth of the way from either end of the box. (e) None of those answers is correct.

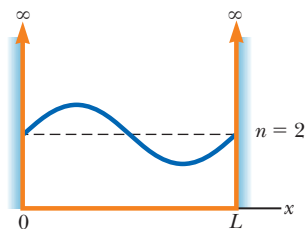


Figure OQ41.5

- Two square wells have the same length. Well 1 has walls of finite height, and well 2 has walls of infinite height. Both wells contain identical quantum particles, one in each well. (i) Is the wavelength of the ground-state wave function (a) greater for well 1, (b) greater for well 2, or (c) equal for both wells? (ii) Is the magnitude of the ground-state momentum (a) greater for well 1, (b) greater for well 2, or (c) equal for both wells? (iii) Is the ground-state energy of the particle (a) greater for well 1, (b) greater for well 2, or (c) equal for both wells?
- The probability of finding a certain quantum particle in the section of the x axis between $x = 4$ nm and $x = 7$ nm is 48%. The particle's wave function $\psi(x)$ is constant over this range. What numerical value can be attributed to $\psi(x)$, in units of $\text{nm}^{-1/2}$? (a) 0.48 (b) 0.16 (c) 0.12 (d) 0.69 (e) 0.40
- Suppose a tunneling current in an electronic device goes through a potential-energy barrier. The tunneling current is small because the width of the barrier is large and the barrier is high. To increase the current most effectively, what should you do? (a) Reduce the width of the barrier. (b) Reduce the height of the barrier. (c) Either choice (a) or choice (b) is equally effective. (d) Neither choice (a) nor choice (b) increases the current.
- Unlike the idealized diagram of Figure 41.11, a typical tip used for a scanning tunneling microscope is rather jagged on the atomic scale, with several irregularly spaced points. For such a tip, does most of the

tunneling current occur between the sample and (a) all the points of the tip equally, (b) the most centrally located point, (c) the point closest to the sample, or (d) the point farthest from the sample?

10. Figure OQ41.10 represents the wave function for a hypothetical quantum particle in a given region. From the choices *a* through *e*, at what value of *x* is the particle most likely to be found?

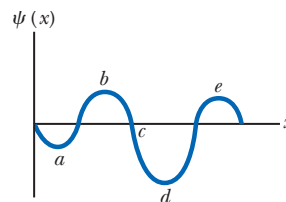


Figure OQ41.10

Conceptual Questions

1. denotes answer available in *Student Solutions Manual/Study Guide*

1. Richard Feynman said, “A philosopher once said that ‘it is necessary for the very existence of science that the same conditions always produce the same results.’ Well, they don’t!” In view of what has been discussed in this chapter, present an argument showing that the philosopher’s statement is false. How might the statement be reworded to make it true?

- 2.** Discuss the relationship between ground-state energy and the uncertainty principle.

3. For a quantum particle in a box, the probability density at certain points is zero as seen in Figure CQ41.3. Does this value imply that the particle cannot move across these points? Explain.

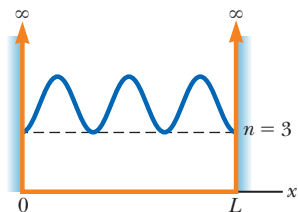


Figure CQ41.3

4. Why are the following wave functions not physically possible for all values of *x*? (a) $\psi(x) = Ae^x$ (b) $\psi(x) = A \tan x$
5. What is the significance of the wave function ψ ?
6. In quantum mechanics, it is possible for the energy *E* of a particle to be less than the potential energy, but classically this condition is not possible. Explain.
7. Consider the wave functions in Figure CQ41.7. Which of them are not physically significant in the interval shown? For those that are not, state why they fail to qualify.
8. How is the Schrödinger equation useful in describing quantum phenomena?

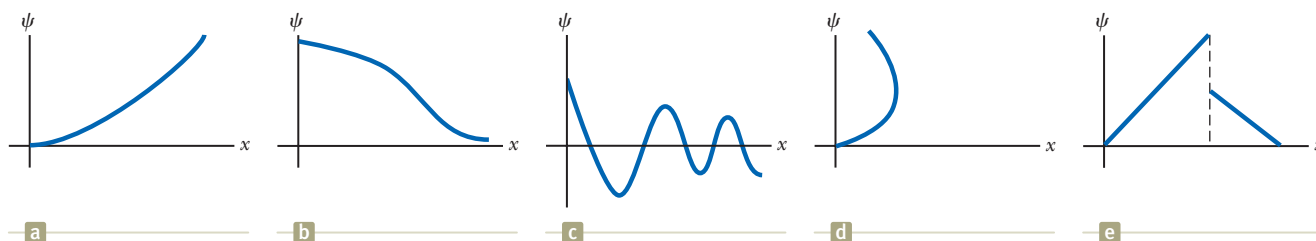


Figure CQ41.7

Problems

WebAssign

The problems found in this chapter may be assigned online in Enhanced WebAssign

1. straightforward; 2. intermediate; 3. challenging

- 1.** full solution available in the *Student Solutions Manual/Study Guide*

AMT Analysis Model tutorial available in Enhanced WebAssign

GP Guided Problem

M Master It tutorial available in Enhanced WebAssign

W Watch It video solution available in Enhanced WebAssign

Section 41.1 The Wave Function

- 1.** A free electron has a wave function

$$\psi(x) = Ae^{i(5.00 \times 10^{10} x)}$$

where *x* is in meters. Find its (a) de Broglie wavelength, (b) momentum, and (c) kinetic energy in electron volts.

2. The wave function for a particle is given by $\psi(x) = Ae^{-|x|/a}$, where *A* and *a* are constants. (a) Sketch this function for values of *x* in the interval $-3a < x < 3a$. (b) Determine the value of *A*. (c) Find the probability that the particle will be found in the interval $-a < x < a$.

3. The wave function for a quantum particle is given by $\psi(x) = Ax$ between $x = 0$ and $x = 1.00$, and $\psi(x) = 0$ elsewhere. Find (a) the value of the normalization constant A , (b) the probability that the particle will be found between $x = 0.300$ and $x = 0.400$, and (c) the expectation value of the particle's position.
4. The wave function for a quantum particle is

$$\psi(x) = \sqrt{\frac{a}{\pi(x^2 + a^2)}}$$

for $a > 0$ and $-\infty < x < +\infty$. Determine the probability that the particle is located somewhere between $x = -a$ and $x = +a$.

Section 41.2 Analysis Model: Quantum Particle Under Boundary Conditions

5. (a) Use the quantum-particle-in-a-box model to calculate the first three energy levels of a neutron trapped in an atomic nucleus of diameter 20.0 fm. (b) Explain whether the energy-level differences have a realistic order of magnitude.
6. An electron that has an energy of approximately 6 eV moves between infinitely high walls 1.00 nm apart. Find (a) the quantum number n for the energy state the electron occupies and (b) the precise energy of the electron.
7. An electron is contained in a one-dimensional box of length 0.100 nm. (a) Draw an energy-level diagram for the electron for levels up to $n = 4$. (b) Photons are emitted by the electron making downward transitions that could eventually carry it from the $n = 4$ state to the $n = 1$ state. Find the wavelengths of all such photons.
8. *Why is the following situation impossible?* A proton is in an infinitely deep potential well of length 1.00 nm. It absorbs a microwave photon of wavelength 6.06 mm and is excited into the next available quantum state.
9. A ruby laser emits 694.3-nm light. Assume light of this wavelength is due to a transition of an electron in a box from its $n = 2$ state to its $n = 1$ state. Find the length of the box.
10. A laser emits light of wavelength λ . Assume this light is due to a transition of an electron in a box from its $n = 2$ state to its $n = 1$ state. Find the length of the box.
11. The nuclear potential energy that binds protons and neutrons in a nucleus is often approximated by a square well. Imagine a proton confined in an infinitely high square well of length 10.0 fm, a typical nuclear diameter. Assuming the proton makes a transition from the $n = 2$ state to the ground state, calculate (a) the energy and (b) the wavelength of the emitted photon. (c) Identify the region of the electromagnetic spectrum to which this wavelength belongs.
12. A proton is confined to move in a one-dimensional box of length 0.200 nm. (a) Find the lowest possible energy of the proton. (b) **What If?** What is the lowest possible energy of an electron confined to the same box?
- (c) How do you account for the great difference in your results for parts (a) and (b)?
13. An electron is confined to a one-dimensional region in which its ground-state ($n = 1$) energy is 2.00 eV. (a) What is the length L of the region? (b) What energy input is required to promote the electron to its first excited state?
14. A 4.00-g particle confined to a box of length L has a speed of 1.00 mm/s. (a) What is the classical kinetic energy of the particle? (b) If the energy of the first excited state ($n = 2$) is equal to the kinetic energy found in part (a), what is the value of L ? (c) Is the result found in part (b) realistic? Explain.
15. A photon with wavelength λ is absorbed by an electron confined to a box. As a result, the electron moves from state $n = 1$ to $n = 4$. (a) Find the length of the box. (b) What is the wavelength λ' of the photon emitted in the transition of that electron from the state $n = 4$ to the state $n = 2$?
16. For a quantum particle of mass m in the ground state of a square well with length L and infinitely high walls, the uncertainty in position is $\Delta x \approx L$. (a) Use the uncertainty principle to estimate the uncertainty in its momentum. (b) Because the particle stays inside the box, its average momentum must be zero. Its average squared momentum is then $\langle p^2 \rangle \approx (\Delta p)^2$. Estimate the energy of the particle. (c) State how the result of part (b) compares with the actual ground-state energy.
17. A quantum particle is described by the wave function
- $$\psi(x) = \begin{cases} A \cos\left(\frac{2\pi x}{L}\right) & \text{for } -\frac{L}{4} \leq x \leq \frac{L}{4} \\ 0 & \text{elsewhere} \end{cases}$$
- (a) Determine the normalization constant A . (b) What is the probability that the particle will be found between $x = 0$ and $x = L/8$ if its position is measured?
18. The wave function for a quantum particle confined to moving in a one-dimensional box located between $x = 0$ and $x = L$ is
- $$\psi(x) = A \sin\left(\frac{n\pi x}{L}\right)$$
- Use the normalization condition on ψ to show that
- $$A = \sqrt{\frac{2}{L}}$$
19. A quantum particle in an infinitely deep square well has a wave function given by
- $$\psi_2(x) = \sqrt{\frac{2}{L}} \sin\left(\frac{2\pi x}{L}\right)$$
- for $0 \leq x \leq L$ and zero otherwise. (a) Determine the expectation value of x . (b) Determine the probability of finding the particle near $\frac{1}{2}L$ by calculating the probability that the particle lies in the range $0.490L \leq x \leq 0.510L$. (c) **What If?** Determine the probability of finding the particle near $\frac{1}{4}L$ by calculating the probability that the particle lies in the range $0.240L \leq x \leq 0.260L$.

(d) Argue that the result of part (a) does not contradict the results of parts (b) and (c).

20. An electron in an infinitely deep square well has a wave function that is given by

$$\psi_3(x) = \sqrt{\frac{2}{L}} \sin\left(\frac{3\pi x}{L}\right)$$

for $0 \leq x \leq L$ and is zero otherwise. (a) What are the most probable positions of the electron? (b) Explain how you identify them.

21. An electron is trapped in an infinitely deep potential well 0.300 nm in length. (a) If the electron is in its ground state, what is the probability of finding it within 0.100 nm of the left-hand wall? (b) Identify the classical probability of finding the electron in this interval and state how it compares with the answer to part (a). (c) Repeat parts (a) and (b) assuming the particle is in the 99th energy state.
22. A quantum particle is in the $n = 1$ state of an infinitely deep square well with walls at $x = 0$ and $x = L$. Let ℓ be an arbitrary value of x between $x = 0$ and $x = L$. (a) Find an expression for the probability, as a function of ℓ , that the particle will be found between $x = 0$ and $x = \ell$. (b) Sketch the probability as a function of the variable ℓ/L . Choose values of ℓ/L ranging from 0 to 1.00 in steps of 0.100. (c) Explain why the probability function must have particular values at $\ell/L = 0$ and at $\ell/L = 1$. (d) Find the value of ℓ for which the probability of finding the particle between $x = 0$ and $x = \ell$ is twice the probability of finding the particle between $x = \ell$ and $x = L$. *Suggestion:* Solve the transcendental equation for ℓ/L numerically.

23. **M** A quantum particle in an infinitely deep square well has a wave function that is given by

$$\psi_1(x) = \sqrt{\frac{2}{L}} \sin\left(\frac{\pi x}{L}\right)$$

for $0 \leq x \leq L$ and is zero otherwise. (a) Determine the probability of finding the particle between $x = 0$ and $x = \frac{1}{3}L$. (b) Use the result of this calculation and a symmetry argument to find the probability of finding the particle between $x = \frac{1}{3}L$ and $x = \frac{2}{3}L$. Do not re-evaluate the integral.

Section 41.3 The Schrödinger Equation

24. Show that the wave function $\psi = Ae^{i(kx - \omega t)}$ is a solution to the Schrödinger equation (Eq. 41.15), where $k = 2\pi/\lambda$ and $U = 0$.

25. The wave function of a quantum particle of mass m is

$$\psi(x) = A \cos(kx) + B \sin(kx)$$

where A , B , and k are constants. (a) Assuming the particle is free ($U = 0$), show that $\psi(x)$ is a solution of the Schrödinger equation (Eq. 41.15). (b) Find the corresponding energy E of the particle.

26. Consider a quantum particle moving in a one-dimensional box for which the walls are at $x = -L/2$ and $x = L/2$. (a) Write the wave functions and probability

densities for $n = 1$, $n = 2$, and $n = 3$. (b) Sketch the wave functions and probability densities.

27. In a region of space, a quantum particle with zero total energy has a wave function

$$\psi(x) = Axe^{-x^2/L^2}$$

- (a) Find the potential energy U as a function of x . (b) Make a sketch of $U(x)$ versus x .

28. A quantum particle of mass m moves in a potential well of length $2L$. Its potential energy is infinite for $x < -L$ and for $x > +L$. In the region $-L < x < L$, its potential energy is given by

$$U(x) = \frac{-\hbar^2 x^2}{mL^2(L^2 - x^2)}$$

In addition, the particle is in a stationary state that is described by the wave function $\psi(x) = A(1 - x^2/L^2)$ for $-L < x < +L$ and by $\psi(x) = 0$ elsewhere. (a) Determine the energy of the particle in terms of \hbar , m , and L . (b) Determine the normalization constant A . (c) Determine the probability that the particle is located between $x = -L/3$ and $x = +L/3$.

Section 41.4 A Particle in a Well of Finite Height

29. Sketch (a) the wave function $\psi(x)$ and (b) the probability density $|\psi(x)|^2$ for the $n = 4$ state of a quantum particle in a finite potential well. (See Fig. 41.7.)

30. Suppose a quantum particle is in its ground state in a box that has infinitely high walls (see Fig. 41.4a). Now suppose the left-hand wall is suddenly lowered to a finite height and width. (a) Qualitatively sketch the wave function for the particle a short time later. (b) If the box has a length L , what is the wavelength of the wave that penetrates the left-hand wall?

Section 41.5 Tunneling Through a Potential Energy Barrier

31. **M** An electron with kinetic energy $E = 5.00$ eV is incident on a barrier of width $L = 0.200$ nm and height $U = 10.0$ eV (Fig. P41.31). What is the probability that the electron (a) tunnels through the barrier? (b) Is reflected?

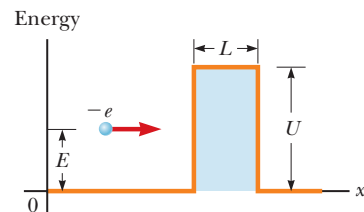


Figure P41.31 Problems 31 and 32.

32. **W** An electron having total energy $E = 4.50$ eV approaches a rectangular energy barrier with $U = 5.00$ eV and $L = 950$ pm as shown in Figure P41.31. Classically, the electron cannot pass through the barrier because $E < U$. Quantum-mechanically, however, the probability of tunneling is not zero. (a) Calculate this probability, which is the transmission coefficient. (b) To what value would the width L of the potential barrier have to be increased for the chance of an inci-

dent 4.50-eV electron tunneling through the barrier to be one in one million?

- 33.** An electron has a kinetic energy of 12.0 eV. The electron is incident upon a rectangular barrier of height 20.0 eV and width 1.00 nm. If the electron absorbed all the energy of a photon of green light (with wavelength 546 nm) at the instant it reached the barrier, by what factor would the electron's probability of tunneling through the barrier increase?

Section 41.6 Applications of Tunneling

- 34.** A scanning tunneling microscope (STM) can precisely determine the depths of surface features because the current through its tip is very sensitive to differences in the width of the gap between the tip and the sample surface. Assume the electron wave function falls off exponentially in this direction with a decay length of 0.100 nm, that is, with $C = 10.0 \text{ nm}^{-1}$. Determine the ratio of the current when the STM tip is 0.500 nm above a surface feature to the current when the tip is 0.515 nm above the surface.
- 35.** The design criterion for a typical scanning tunneling microscope (STM) specifies that it must be able to detect, on the sample below its tip, surface features that differ in height by only 0.002 00 nm. Assuming the electron transmission coefficient is e^{-2CL} with $C = 10.0 \text{ nm}^{-1}$, what percentage change in electron transmission must the electronics of the STM be able to detect to achieve this resolution?

Section 41.7 The Simple Harmonic Oscillator

- 36.** A one-dimensional harmonic oscillator wave function is

$$\psi = Axe^{-bx^2}$$

- (a) Show that ψ satisfies Equation 41.24. (b) Find b and the total energy E . (c) Is this wave function for the ground state or for the first excited state?
- 37.** A quantum simple harmonic oscillator consists of an electron bound by a restoring force proportional to its position relative to a certain equilibrium point. The proportionality constant is 8.99 N/m. What is the longest wavelength of light that can excite the oscillator?
- 38.** A quantum simple harmonic oscillator consists of a particle of mass m bound by a restoring force proportional to its position relative to a certain equilibrium point. The proportionality constant is k . What is the longest wavelength of light that can excite the oscillator?
- 39.** (a) Normalize the wave function for the ground state of a simple harmonic oscillator. That is, apply Equation 41.7 to Equation 41.26 and find the required value for the constant B in terms of m , ω , and fundamental constants. (b) Determine the probability of finding the oscillator in a narrow interval $-\delta/2 < x < \delta/2$ around its equilibrium position.
- 40.** Two particles with masses m_1 and m_2 are joined by a light spring of force constant k . They vibrate along a straight line with their center of mass fixed. (a) Show that the total energy

$$\frac{1}{2}m_1u_1^2 + \frac{1}{2}m_2u_2^2 + \frac{1}{2}kx^2$$

can be written as $\frac{1}{2}\mu u^2 + \frac{1}{2}kx^2$, where $u = |u_1| + |u_2|$ is the *relative* speed of the particles and $\mu = m_1m_2/(m_1 + m_2)$ is the reduced mass of the system. This result demonstrates that the pair of freely vibrating particles can be precisely modeled as a single particle vibrating on one end of a spring that has its other end fixed. (b) Differentiate the equation

$$\frac{1}{2}\mu u^2 + \frac{1}{2}kx^2 = \text{constant}$$

with respect to x . Proceed to show that the system executes simple harmonic motion. (c) Find its frequency.

- 41.** The total energy of a particle–spring system in which the particle moves with simple harmonic motion along the x axis is

$$E = \frac{p_x^2}{2m} + \frac{kx^2}{2}$$

where p_x is the momentum of the quantum particle and k is the spring constant. (a) Using the uncertainty principle, show that this expression can also be written as

$$E \geq \frac{p_x^2}{2m} + \frac{k\hbar^2}{8p_x^2}$$

(b) Show that the minimum energy of the harmonic oscillator is

$$E_{\min} = K + U = \frac{1}{4}\hbar\sqrt{\frac{k}{m}} + \frac{\hbar\omega}{4} = \frac{\hbar\omega}{2}$$

- 42.** Show that Equation 41.26 is a solution of Equation 41.24 with energy $E = \frac{1}{2}\hbar\omega$.

Additional Problems

- 43.** A particle of mass $2.00 \times 10^{-28} \text{ kg}$ is confined to a one-dimensional box of length $1.00 \times 10^{-10} \text{ m}$. For $n = 1$, what are (a) the particle's wavelength, (b) its momentum, and (c) its ground-state energy?
- 44.** Prove that the first term in the Schrödinger equation, $-(\hbar^2/2m)(d^2\psi/dx^2)$, reduces to the kinetic energy of the quantum particle multiplied by the wave function (a) for a freely moving particle, with the wave function given by Equation 41.4, and (b) for a particle in a box, with the wave function given by Equation 41.13.
- 45.** A particle in a one-dimensional box of length L is in its first excited state, corresponding to $n = 2$. Determine the probability of finding the particle between $x = 0$ and $x = L/4$.
- 46.** Prove that assuming $n = 0$ for a quantum particle in an infinitely deep potential well leads to a violation of the uncertainty principle $\Delta p_x \Delta x \geq \hbar/2$.
- 47.** Calculate the transmission probability for quantum-mechanical tunneling in each of the following cases. (a) An electron with an energy deficit of $U - E = 0.010 \text{ eV}$ is incident on a square barrier of width $L = 0.100 \text{ nm}$. (b) An electron with an energy deficit of 1.00 eV is incident on the same barrier. (c) An alpha particle (mass $6.64 \times 10^{-27} \text{ kg}$) with an energy deficit

of 1.00 MeV is incident on a square barrier of width 1.00 fm. (d) An 8.00-kg bowling ball with an energy deficit of 1.00 J is incident on a square barrier of width 2.00 cm.

48. An electron in an infinitely deep potential well has a ground-state energy of 0.300 eV. (a) Show that the photon emitted in a transition from the $n = 3$ state to the $n = 1$ state has a wavelength of 517 nm, which makes it green visible light. (b) Find the wavelength and the spectral region for each of the other five transitions that take place among the four lowest energy levels.
49. An atom in an excited state 1.80 eV above the ground state remains in that excited state $2.00 \mu\text{s}$ before moving to the ground state. Find (a) the frequency and (b) the wavelength of the emitted photon. (c) Find the approximate uncertainty in energy of the photon.
50. A marble rolls back and forth across a shoebox at a constant speed of 0.8 m/s. Make an order-of-magnitude estimate of the probability of it escaping through the wall of the box by quantum tunneling. State the quantities you take as data and the values you measure or estimate for them.
51. An electron confined to a box absorbs a photon with wavelength λ . As a result, the electron makes a transition from the $n = 1$ state to the $n = 3$ state. (a) Find the length of the box. (b) What is the wavelength λ' of the photon emitted when the electron makes a transition from the $n = 3$ state to the $n = 2$ state?

52. For a quantum particle described by a wave function $\psi(x)$, the expectation value of a physical quantity $f(x)$ associated with the particle is defined by

$$\langle f(x) \rangle \equiv \int_{-\infty}^{\infty} \psi^* f(x) \psi dx$$

For a particle in an infinitely deep one-dimensional box extending from $x = 0$ to $x = L$, show that

$$\langle x^2 \rangle = \frac{L^2}{3} - \frac{L^2}{2n^2\pi^2}$$

53. A quantum particle of mass m is placed in a one-dimensional box of length L . Assume the box is so small that the particle's motion is relativistic and $K = p^2/2m$ is not valid. (a) Derive an expression for the kinetic energy levels of the particle. (b) Assume the particle is an electron in a box of length $L = 1.00 \times 10^{-12}$ m. Find its lowest possible kinetic energy. (c) By what percent is the nonrelativistic equation in error? *Suggestion:* See Equation 39.23.
54. Why is the following situation impossible? A particle is in the ground state of an infinite square well of length L . A light source is adjusted so that the photons of wavelength λ are absorbed by the particle as it makes a transition to the first excited state. An identical particle is in the ground state of a finite square well of length L . The light source sends photons of the same wavelength λ toward this particle. The photons are not absorbed because the allowed energies of the finite square well

are different from those of the infinite square well. To cause the photons to be absorbed, you move the light source at a high speed toward the particle in the finite square well. You are able to find a speed at which the Doppler-shifted photons are absorbed as the particle makes a transition to the first excited state.

55. A quantum particle has a wave function

$$\psi(x) = \begin{cases} \sqrt{\frac{2}{a}} e^{-x/a} & \text{for } x > 0 \\ 0 & \text{for } x < 0 \end{cases}$$

(a) Find and sketch the probability density. (b) Find the probability that the particle will be at any point where $x < 0$. (c) Show that ψ is normalized and then (d) find the probability of finding the particle between $x = 0$ and $x = a$.

56. An electron is confined to move in the xy plane in a rectangle whose dimensions are L_x and L_y . That is, the electron is trapped in a two-dimensional potential well having lengths of L_x and L_y . In this situation, the allowed energies of the electron depend on two quantum numbers n_x and n_y and are given by

$$E = \frac{h^2}{8m_e} \left(\frac{n_x^2}{L_x^2} + \frac{n_y^2}{L_y^2} \right)$$

Using this information, we wish to find the wavelength of a photon needed to excite the electron from the ground state to the second excited state, assuming $L_x = L_y = L$. (a) Using the assumption on the lengths, write an expression for the allowed energies of the electron in terms of the quantum numbers n_x and n_y . (b) What values of n_x and n_y correspond to the ground state? (c) Find the energy of the ground state. (d) What are the possible values of n_x and n_y for the first excited state, that is, the next-highest state in terms of energy? (e) What are the possible values of n_x and n_y for the second excited state? (f) Using the values in part (e), what is the energy of the second excited state? (g) What is the energy difference between the ground state and the second excited state? (h) What is the wavelength of a photon that will cause the transition between the ground state and the second excited state?

57. The normalized wave functions for the ground state, $\psi_0(x)$, and the first excited state, $\psi_1(x)$, of a quantum harmonic oscillator are

$$\psi_0(x) = \left(\frac{a}{\pi}\right)^{1/4} e^{-ax^2/2} \quad \psi_1(x) = \left(\frac{4a^3}{\pi}\right)^{1/4} x e^{-ax^2/2}$$

where $a = m\omega/\hbar$. A mixed state, $\psi_{01}(x)$, is constructed from these states:

$$\psi_{01}(x) = \frac{1}{\sqrt{2}} [\psi_0(x) + \psi_1(x)]$$

The symbol $\langle q \rangle_s$ denotes the expectation value of the quantity q for the state $\psi_s(x)$. Calculate the expectation values (a) $\langle x \rangle_0$, (b) $\langle x \rangle_1$, and (c) $\langle x \rangle_{01}$.

58. A two-slit electron diffraction experiment is done with slits of *unequal* widths. When only slit 1 is open, the

number of electrons reaching the screen per second is 25.0 times the number of electrons reaching the screen per second when only slit 2 is open. When both slits are open, an interference pattern results in which the destructive interference is not complete. Find the ratio of the probability of an electron arriving at an interference maximum to the probability of an electron arriving at an adjacent interference minimum. *Suggestion:* Use the superposition principle.

Challenge Problems

- 59.** Particles incident from the left in Figure P41.59 are confronted with a step in potential energy. The step has a height U at $x = 0$. The particles have energy $E > U$. Classically, all the particles would continue moving forward with reduced speed. According to quantum mechanics, however, a fraction of the particles are reflected at the step. (a) Prove that the reflection coefficient R for this case is

$$R = \frac{(k_1 - k_2)^2}{(k_1 + k_2)^2}$$

where $k_1 = 2\pi/\lambda_1$ and $k_2 = 2\pi/\lambda_2$ are the wave numbers for the incident and transmitted particles, respectively. Proceed as follows. Show that the wave function $\psi_1 = Ae^{ik_1x} + Be^{-ik_1x}$ satisfies the Schrödinger equation in region 1, for $x < 0$. Here Ae^{ik_1x} represents the incident beam and Be^{-ik_1x} represents the reflected particles. Show that $\psi_2 = Ce^{ik_2x}$ satisfies the Schrödinger equation in region 2, for $x > 0$. Impose the boundary conditions $\psi_1 = \psi_2$ and $d\psi_1/dx = d\psi_2/dx$, at $x = 0$, to find the relationship between B and A . Then evaluate $R = B^2/A^2$. A particle that has kinetic energy $E = 7.00$ eV is incident from a region where the potential energy is zero onto one where $U = 5.00$ eV. Find (b) its probability of being reflected and (c) its probability of being transmitted.

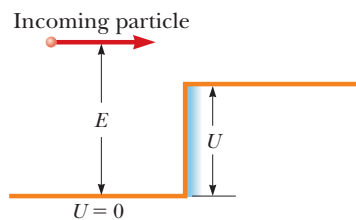


Figure P41.59

- 60.** Consider a “crystal” consisting of two fixed ions of charge $+e$ and two electrons as shown in Figure P41.60. (a) Taking into account all the pairs of interactions, find the potential energy of the system as a function of d . (b) Assuming the electrons to be restricted to a one-

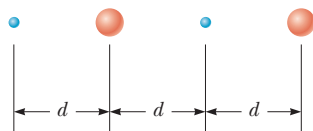


Figure P41.60

dimensional box of length $3d$, find the minimum kinetic energy of the two electrons. (c) Find the value of d for which the total energy is a minimum. (d) State how this value of d compares with the spacing of atoms in lithium, which has a density of 0.530 g/cm³ and a molar mass of 6.94 g/mol.

- 61.** An electron is trapped in a quantum dot. The quantum dot may be modeled as a one-dimensional, rigid-walled box of length 1.00 nm. (a) Taking $x = 0$ as the left side of the box, calculate the probability of finding the electron between $x_1 = 0.150$ nm and $x_2 = 0.350$ nm for the $n = 1$ state. (b) Repeat part (a) for the $n = 2$ state. Calculate the energies in electron volts of (c) the $n = 1$ state and (d) the $n = 2$ state.
- 62.** An electron is represented by the time-independent wave function

$$\psi(x) = \begin{cases} Ae^{-\alpha x} & \text{for } x > 0 \\ Ae^{+\alpha x} & \text{for } x < 0 \end{cases}$$

(a) Sketch the wave function as a function of x . (b) Sketch the probability density representing the likelihood that the electron is found between x and $x + dx$. (c) Only an infinite value of potential energy could produce the discontinuity in the derivative of the wave function at $x = 0$. Aside from this feature, argue that $\psi(x)$ can be a physically reasonable wave function. (d) Normalize the wave function. (e) Determine the probability of finding the electron somewhere in the range

$$-\frac{1}{2\alpha} \leq x \leq \frac{1}{2\alpha}$$

- 63.** The wave function

$$\psi(x) = Bxe^{-(m\omega/2\hbar)x^2}$$

is a solution to the simple harmonic oscillator problem. (a) Find the energy of this state. (b) At what position are you least likely to find the particle? (c) At what positions are you most likely to find the particle? (d) Determine the value of B required to normalize the wave function. (e) **What If?** Determine the classical probability of finding the particle in an interval of small length δ centered at the position $x = 2(\hbar/m\omega)^{1/2}$. (f) What is the actual probability of finding the particle in this interval?

- 64.** (a) Find the normalization constant A for a wave function made up of the two lowest states of a quantum particle in a box extending from $x = 0$ to $x = L$:

$$\psi(x) = A \left[\sin\left(\frac{\pi x}{L}\right) + 4 \sin\left(\frac{2\pi x}{L}\right) \right]$$

(b) A particle is described in the space $-a \leq x \leq a$ by the wave function

$$\psi(x) = A \cos\left(\frac{\pi x}{2a}\right) + B \sin\left(\frac{\pi x}{a}\right)$$

Determine the relationship between the values of A and B required for normalization.

- 42.1 Atomic Spectra of Gases
- 42.2 Early Models of the Atom
- 42.3 Bohr's Model of the Hydrogen Atom
- 42.4 The Quantum Model of the Hydrogen Atom
- 42.5 The Wave Functions for Hydrogen
- 42.6 Physical Interpretation of the Quantum Numbers
- 42.7 The Exclusion Principle and the Periodic Table
- 42.8 More on Atomic Spectra: Visible and X-Ray
- 42.9 Spontaneous and Stimulated Transitions
- 42.10 Lasers



This street in the Ginza district in Tokyo displays many signs formed from neon lamps of varying bright colors. The light from these lamps has its origin in transitions between quantized energy states in the atoms contained in the lamps. In this chapter, we investigate those transitions. (© Ken Straiton/Corbis)

In Chapter 41, we introduced some basic concepts and techniques used in quantum mechanics along with their applications to various one-dimensional systems. In this chapter, we apply quantum mechanics to atomic systems. A large portion of the chapter is focused on the application of quantum mechanics to the study of the hydrogen atom. Understanding the hydrogen atom, the simplest atomic system, is important for several reasons:

- The hydrogen atom is the only atomic system that can be solved exactly.
- Much of what was learned in the 20th century about the hydrogen atom, with its single electron, can be extended to such single-electron ions as He^+ and Li^{2+} .
- The hydrogen atom is an ideal system for performing precise tests of theory against experiment and for improving our overall understanding of atomic structure.

- The quantum numbers that are used to characterize the allowed states of hydrogen can also be used to investigate more complex atoms, and such a description enables us to understand the periodic table of the elements. This understanding is one of the greatest triumphs of quantum mechanics.
- The basic ideas about atomic structure must be well understood before we attempt to deal with the complexities of molecular structures and the electronic structure of solids.

The full mathematical solution of the Schrödinger equation applied to the hydrogen atom gives a complete and beautiful description of the atom's properties. Because the mathematical procedures involved are beyond the scope of this text, however, many details are omitted. The solutions for some states of hydrogen are discussed, together with the quantum numbers used to characterize various allowed states. We also discuss the physical significance of the quantum numbers and the effect of a magnetic field on certain quantum states.

A new physical idea, the *exclusion principle*, is presented in this chapter. This principle is extremely important for understanding the properties of multielectron atoms and the arrangement of elements in the periodic table.

Finally, we apply our knowledge of atomic structure to describe the mechanisms involved in the production of x-rays and in the operation of a laser.

42.1 Atomic Spectra of Gases

As pointed out in Section 40.1, all objects emit thermal radiation characterized by a *continuous* distribution of wavelengths. In sharp contrast to this continuous-distribution spectrum is the *discrete line spectrum* observed when a low-pressure gas undergoes an electric discharge. (Electric discharge occurs when the gas is subject to a potential difference that creates an electric field greater than the dielectric strength of the gas.) Observation and analysis of these spectral lines is called **emission spectroscopy**.

When the light from a gas discharge is examined using a spectrometer (see Fig. 38.15), it is found to consist of a few bright lines of color on a generally dark background. This discrete line spectrum contrasts sharply with the continuous rainbow of colors seen when a glowing solid is viewed through the same instrument. Figure 42.1a (page 1298) shows that the wavelengths contained in a given line spectrum are characteristic of the element emitting the light. The simplest line spectrum is that for atomic hydrogen, and we describe this spectrum in detail. Because no two elements have the same line spectrum, this phenomenon represents a practical and sensitive technique for identifying the elements present in unknown samples.

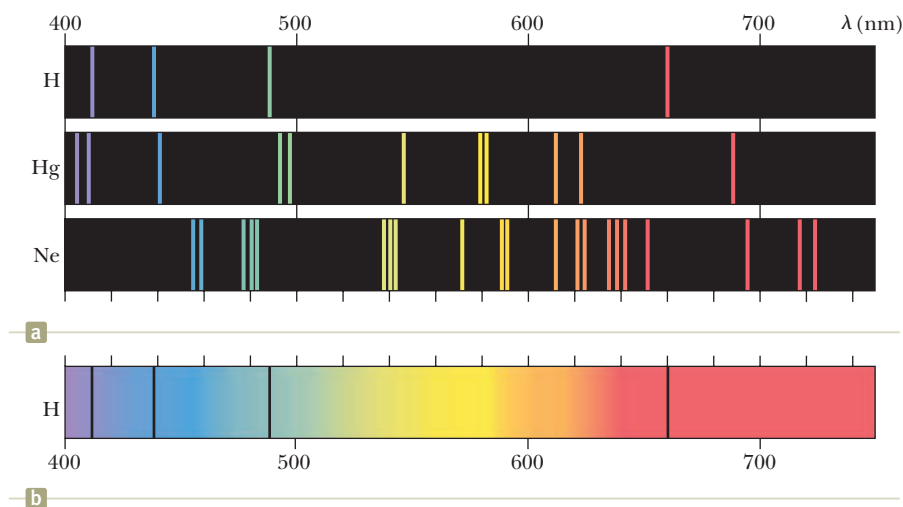
Another form of spectroscopy very useful in analyzing substances is **absorption spectroscopy**. An absorption spectrum is obtained by passing white light from a continuous source through a gas or a dilute solution of the element being analyzed. The absorption spectrum consists of a series of dark lines superimposed on the continuous spectrum of the light source as shown in Figure 42.1b for atomic hydrogen.

The absorption spectrum of an element has many practical applications. For example, the continuous spectrum of radiation emitted by the Sun must pass through the cooler gases of the solar atmosphere. The various absorption lines observed in the solar spectrum have been used to identify elements in the solar atmosphere. In early studies of the solar spectrum, experimenters found some lines that did not correspond to any known element. A new element had been discovered!

Pitfall Prevention 42.1

Why Lines? The phrase “spectral lines” is often used when discussing the radiation from atoms. Lines are seen because the light passes through a long and very narrow slit before being separated by wavelength. You will see many references to these “lines” in both physics and chemistry.

Figure 42.1 (a) Emission line spectra for hydrogen, mercury, and neon. (b) The absorption spectrum for hydrogen. Notice that the dark absorption lines occur at the same wavelengths as the hydrogen emission lines in (a). (K. W. Whitten, R. E. Davis, M. L. Peck, and G. G. Stanley, *General Chemistry*, 7th ed., Belmont, CA, Brooks/Cole, 2004.)



The new element was named helium, after the Greek word for Sun, *helios*. Helium was subsequently isolated from subterranean gas on the Earth.

Using this technique, scientists have examined the light from stars other than our Sun and have never detected elements other than those present on the Earth. Absorption spectroscopy has also been useful in analyzing heavy-metal contamination of the food chain. For example, the first determination of high levels of mercury in tuna was made with the use of atomic absorption spectroscopy.

The discrete emissions of light from gas discharges are used in “neon” signs such as those in the opening photograph of this chapter. Neon, the first gas used in these types of signs and the gas after which these signs are named, emits strongly in the red region. As a result, a glass tube filled with neon gas emits bright red light when an applied voltage causes a continuous discharge. Early signs used different gases to provide different colors, although the brightness of these signs was generally very low. Many present-day “neon” signs contain mercury vapor, which emits strongly in the ultraviolet range of the electromagnetic spectrum. The inside of a present-day sign’s glass tube is coated with a material that emits a particular color when it absorbs ultraviolet radiation from the mercury. The color of the light from the tube results from the particular material chosen. A household fluorescent light operates in the same manner, with a white-emitting material coating the inside of the glass tube.

From 1860 to 1885, scientists accumulated a great deal of data on atomic emissions using spectroscopic measurements. In 1885, a Swiss schoolteacher, Johann Jacob Balmer (1825–1898), found an empirical equation that correctly predicted the wavelengths of four visible emission lines of hydrogen: H_α (red), H_β (blue-green), H_γ (blue-violet), and H_δ (violet). Figure 42.2 shows these and other lines (in the ultraviolet) in the emission spectrum of hydrogen. The four visible lines occur at the wavelengths 656.3 nm, 486.1 nm, 434.1 nm, and 410.2 nm. The complete set of lines is called the **Balmer series**. The wavelengths of these lines can be described by the following equation, which is a modification made by Johannes Rydberg (1854–1919) of Balmer’s original equation:

$$\frac{1}{\lambda} = R_H \left(\frac{1}{2^2} - \frac{1}{n^2} \right) \quad n = 3, 4, 5, \dots \quad (42.1)$$

where R_H is a constant now called the **Rydberg constant** with a value of $1.097\,373\,2 \times 10^7 \text{ m}^{-1}$. The integer values of n from 3 to 6 give the four visible lines from 656.3 nm (red) down to 410.2 nm (violet). Equation 42.1 also describes the ultraviolet spectral lines in the Balmer series if n is carried out beyond $n = 6$. The **series limit** is the shortest wavelength in the series and corresponds to $n \rightarrow \infty$, with a wavelength of 364.6 nm as in Figure 42.2. The measured spectral lines agree with the empirical equation, Equation 42.1, to within 0.1%.

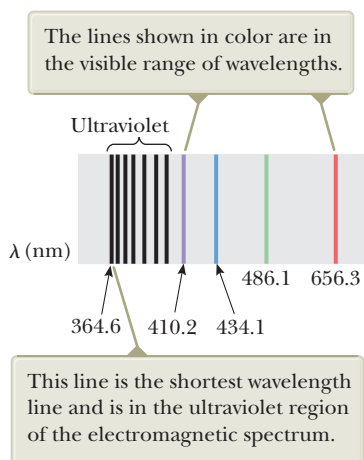


Figure 42.2 The Balmer series of spectral lines for atomic hydrogen, with several lines marked with the wavelength in nanometers. (The horizontal wavelength axis is not to scale.)

Balmer series ▶

Other lines in the spectrum of hydrogen were found following Balmer's discovery. These spectra are called the Lyman, Paschen, and Brackett series after their discoverers. The wavelengths of the lines in these series can be calculated through the use of the following empirical equations:

$$\frac{1}{\lambda} = R_{\text{H}} \left(1 - \frac{1}{n^2} \right) \quad n = 2, 3, 4, \dots \quad (42.2)$$

◀ Lyman series

$$\frac{1}{\lambda} = R_{\text{H}} \left(\frac{1}{3^2} - \frac{1}{n^2} \right) \quad n = 4, 5, 6, \dots \quad (42.3)$$

◀ Paschen series

$$\frac{1}{\lambda} = R_{\text{H}} \left(\frac{1}{4^2} - \frac{1}{n^2} \right) \quad n = 5, 6, 7, \dots \quad (42.4)$$

◀ Brackett series

No theoretical basis existed for these equations; they simply worked. The same constant R_{H} appears in each equation, and all equations involve small integers. In Section 42.3, we shall discuss the remarkable achievement of a theory for the hydrogen atom that provided an explanation for these equations.

42.2 Early Models of the Atom

The model of the atom in the days of Newton was a tiny, hard, indestructible sphere. Although this model provided a good basis for the kinetic theory of gases (Chapter 21), new models had to be devised when experiments revealed the electrical nature of atoms. In 1897, J. J. Thomson established the charge-to-mass ratio for electrons. (See Fig. 29.15 in Section 29.3.) The following year, he suggested a model that describes the atom as a region in which positive charge is spread out in space with electrons embedded throughout the region, much like the seeds in a watermelon or raisins in thick pudding (Fig. 42.3). The atom as a whole would then be electrically neutral.

In 1911, Ernest Rutherford (1871–1937) and his students Hans Geiger and Ernest Marsden performed a critical experiment that showed that Thomson's model could not be correct. In this experiment, a beam of positively charged alpha particles (helium nuclei) was projected into a thin metallic foil such as the target in Figure 42.4a (page 1300). Most of the particles passed through the foil as if it were empty space, but some of the results of the experiment were astounding. Many of the particles deflected from their original direction of travel were scattered through *large* angles. Some particles were even deflected backward, completely reversing their direction of travel! When Geiger informed Rutherford that some alpha particles were scattered backward, Rutherford wrote, "It was quite the most incredible event that has ever happened to me in my life. It was almost as incredible as if you fired a 15-inch [artillery] shell at a piece of tissue paper and it came back and hit you."

Such large deflections were not expected on the basis of Thomson's model. According to that model, the positive charge of an atom in the foil is spread out over such a great volume (the entire atom) that there is no concentration of positive charge strong enough to cause any large-angle deflections of the positively charged alpha particles. Furthermore, the electrons are so much less massive than the alpha particles that they would not cause large-angle scattering either. Rutherford explained his astonishing results by developing a new atomic model, one that assumed the positive charge in the atom was concentrated in a region that was small relative to the size of the atom. He called this concentration of positive charge the **nucleus** of the atom. Any electrons belonging to the atom were assumed to be in the relatively large volume outside the nucleus. To explain why these electrons were not pulled into the nucleus by the attractive electric force, Rutherford modeled them as moving in orbits around the nucleus in the same manner as the planets orbit the Sun (Fig. 42.4b). For this reason, this model is often referred to as the planetary model of the atom.

Two basic difficulties exist with Rutherford's planetary model. As we saw in Section 42.1, an atom emits (and absorbs) certain characteristic frequencies of



Stock Montage, Inc.

Joseph John Thomson

English physicist (1856–1940)

The recipient of a Nobel Prize in Physics in 1906, Thomson is usually considered the discoverer of the electron. He opened up the field of subatomic particle physics with his extensive work on the deflection of cathode rays (electrons) in an electric field.

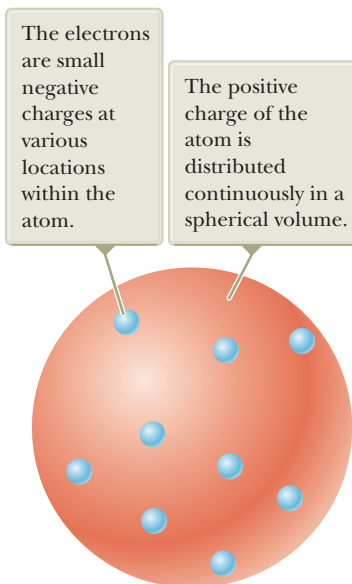


Figure 42.3 Thomson's model of the atom.

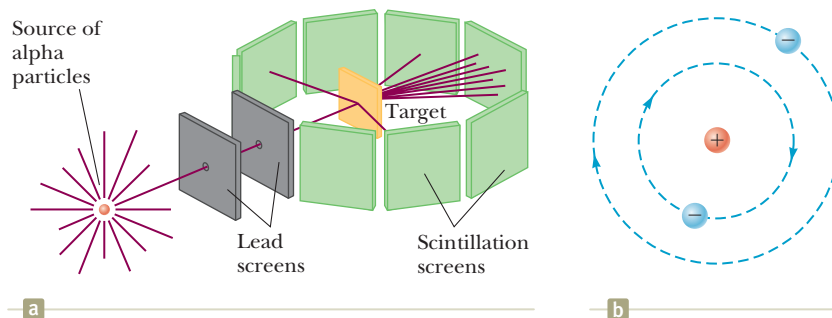


Figure 42.4 (a) Rutherford's technique for observing the scattering of alpha particles from a thin foil target. The source is a naturally occurring radioactive substance, such as radium. (b) Rutherford's planetary model of the atom.

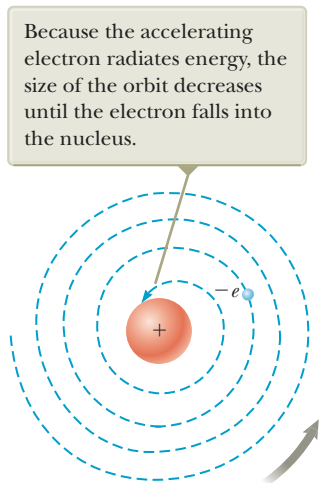


Figure 42.5 The classical model of the nuclear atom predicts that the atom decays.

electromagnetic radiation and no others, but the Rutherford model cannot explain this phenomenon. A second difficulty is that Rutherford's electrons are described by the particle in uniform circular motion model; they have a centripetal acceleration. According to Maxwell's theory of electromagnetism, centripetally accelerated charges revolving with frequency f should radiate electromagnetic waves of frequency f . Unfortunately, this classical model leads to a prediction of self-destruction when applied to the atom. Identifying the electron and the proton as a nonisolated system for energy, Equation 8.2 becomes $\Delta K + \Delta U = T_{\text{ER}}$, where K is the kinetic energy of the electron, U is the electric potential energy of the electron–nucleus system, and T_{ER} represents the outgoing electromagnetic radiation. As energy leaves the system, the radius of the electron's orbit steadily decreases (Fig. 42.5). The system is an isolated system for angular momentum because there is no torque on the system. Therefore, as the electron moves closer to the nucleus, the angular speed of the electron will increase, just like the spinning skater in Figure 11.10 in Section 11.4. This process leads to an ever-increasing frequency of emitted radiation and an ultimate collapse of the atom as the electron plunges into the nucleus.

42.3 Bohr's Model of the Hydrogen Atom

Given the situation described at the end of Section 42.2, the stage was set for Niels Bohr in 1913 when he presented a new model of the hydrogen atom that circumvented the difficulties of Rutherford's planetary model. Bohr applied Planck's ideas of quantized energy levels (Section 40.1) to Rutherford's orbiting atomic electrons. Bohr's theory was historically important to the development of quantum physics, and it appeared to explain the spectral line series described by Equations 42.1 through 42.4. Although Bohr's model is now considered obsolete and has been completely replaced by a probabilistic quantum-mechanical theory, we can use the Bohr model to develop the notions of energy quantization and angular momentum quantization as applied to atomic-sized systems.

Bohr combined ideas from Planck's original quantum theory, Einstein's concept of the photon, Rutherford's planetary model of the atom, and Newtonian mechanics to arrive at a semiclassical structural model based on some revolutionary ideas. The structural model of the Bohr theory as it applies to the hydrogen atom has the following properties:

1. *Physical components:*

The electron moves in circular orbits around the proton under the influence of the electric force of attraction as shown in Figure 42.6.

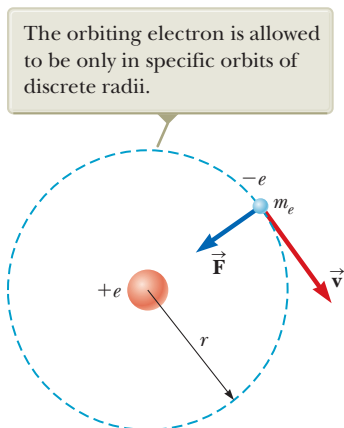


Figure 42.6 Diagram representing Bohr's model of the hydrogen atom.

2. Behavior of the components:

- (a) Only certain electron orbits are stable. When in one of these **stationary states**, as Bohr called them, the electron does not emit energy in the form of radiation, even though it is accelerating. Hence, the total energy of the atom remains constant and classical mechanics can be used to describe the electron's motion. Bohr's model claims that the centripetally accelerated electron does not continuously emit radiation, losing energy and eventually spiraling into the nucleus, as predicted by classical physics in the form of Rutherford's planetary model.
- (b) The atom emits radiation when the electron makes a transition from a more energetic initial stationary state to a lower-energy stationary state. This transition cannot be visualized or treated classically. In particular, the frequency f of the photon emitted in the transition is related to the change in the atom's energy and is not equal to the frequency of the electron's orbital motion. The frequency of the emitted radiation is found from the energy-conservation expression

$$E_i - E_f = hf \quad (42.5)$$

where E_i is the energy of the initial state, E_f is the energy of the final state, and $E_i > E_f$. In addition, energy of an incident photon can be absorbed by the atom, but only if the photon has an energy that exactly matches the difference in energy between an allowed state of the atom and a higher-energy state. Upon absorption, the photon disappears and the atom makes a transition to the higher-energy state.

- (c) The size of an allowed electron orbit is determined by a condition imposed on the electron's orbital angular momentum: the allowed orbits are those for which the electron's orbital angular momentum about the nucleus is quantized and equal to an integral multiple of $\hbar = h/2\pi$,

$$m_e v r = n\hbar \quad n = 1, 2, 3, \dots \quad (42.6)$$

where m_e is the electron mass, v is the electron's speed in its orbit, and r is the orbital radius.

These postulates are a mixture of established principles and completely new and untested ideas at the time. Property 1, from classical mechanics, treats the electron in orbit around the nucleus in the same way we treat a planet in a circular orbit around a star, using the particle in uniform circular motion analysis model. Property 2(a) was a radical new idea in 1913 that was completely at odds with the understanding of electromagnetism at the time. Property 2(b) represents the principle of conservation of energy as described by the nonisolated system model for energy. Property 2(c) is another new idea that had no basis in classical physics.

Property 2(b) implies qualitatively the existence of a characteristic discrete emission line spectrum *and also* a corresponding absorption line spectrum of the kind shown in Figure 42.1 for hydrogen. Using these postulates, let's calculate the allowed energy levels and find quantitative values of the emission wavelengths of the hydrogen atom.

The electric potential energy of the system shown in Figure 42.6 is given by Equation 25.13, $U = k_e q_1 q_2 / r = -k_e e^2 / r$, where k_e is the Coulomb constant and the negative sign arises from the charge $-e$ on the electron. Therefore, the *total* energy of the atom, which consists of the electron's kinetic energy and the system's potential energy, is

$$E = K + U = \frac{1}{2} m_e v^2 - k_e \frac{e^2}{r} \quad (42.7)$$

Bain Collection, Prints & Photographs Division, Library of Congress, LC-DIG-ggbain-35303



Niels Bohr

Danish Physicist (1885–1962)

Bohr was an active participant in the early development of quantum mechanics and provided much of its philosophical framework. During the 1920s and 1930s, he headed the Institute for Advanced Studies in Copenhagen. The institute was a magnet for many of the world's best physicists and provided a forum for the exchange of ideas. Bohr was awarded the 1922 Nobel Prize in Physics for his investigation of the structure of atoms and the radiation emanating from them. When Bohr visited the United States in 1939 to attend a scientific conference, he brought news that the fission of uranium had been observed by Hahn and Strassman in Berlin. The results were the foundations of the nuclear weapon developed in the United States during World War II.

The electron is modeled as a particle in uniform circular motion, so the electric force $k_e e^2/r^2$ exerted on the electron must equal the product of its mass and its centripetal acceleration ($a_c = v^2/r$):

$$\frac{k_e e^2}{r^2} = \frac{m_e v^2}{r}$$

$$v^2 = \frac{k_e e^2}{m_e r} \quad (42.8)$$

From Equation 42.8, we find that the kinetic energy of the electron is

$$K = \frac{1}{2} m_e v^2 = \frac{k_e e^2}{2r}$$

Substituting this value of K into Equation 42.7 gives the following expression for the total energy of the atom:¹

$$E = -\frac{k_e e^2}{2r} \quad (42.9)$$

Because the total energy is *negative*, which indicates a bound electron–proton system, energy in the amount of $k_e e^2/2r$ must be added to the atom to remove the electron and make the total energy of the system zero.

We can obtain an expression for r , the radius of the allowed orbits, by solving Equation 42.6 for v^2 and equating it to Equation 42.8:

$$v^2 = \frac{n^2 \hbar^2}{m_e^2 r^2} = \frac{k_e e^2}{m_e r}$$

$$r_n = \frac{n^2 \hbar^2}{m_e k_e e^2} \quad n = 1, 2, 3, \dots \quad (42.10)$$

Equation 42.10 shows that the radii of the allowed orbits have discrete values: they are quantized. The result is based on the *assumption* that the electron can exist only in certain allowed orbits determined by the integer n (Bohr's Property 2(c)).

The orbit with the smallest radius, called the **Bohr radius** a_0 , corresponds to $n = 1$ and has the value

$$a_0 = \frac{\hbar^2}{m_e k_e e^2} = 0.0529 \text{ nm} \quad (42.11)$$

Substituting Equation 42.11 into Equation 42.10 gives a general expression for the radius of any orbit in the hydrogen atom:

$$r_n = n^2 a_0 = n^2 (0.0529 \text{ nm}) \quad n = 1, 2, 3, \dots \quad (42.12)$$

Bohr's theory predicts a value for the radius of a hydrogen atom on the right order of magnitude, based on experimental measurements. This result was a striking triumph for Bohr's theory. The first three Bohr orbits are shown to scale in Figure 42.7.

The quantization of orbit radii leads to energy quantization. Substituting $r_n = n^2 a_0$ into Equation 42.9 gives

$$E_n = -\frac{k_e e^2}{2a_0} \left(\frac{1}{n^2} \right) \quad n = 1, 2, 3, \dots \quad (42.13)$$

Inserting numerical values into this expression, we find that

$$E_n = -\frac{13.606 \text{ eV}}{n^2} \quad n = 1, 2, 3, \dots \quad (42.14)$$

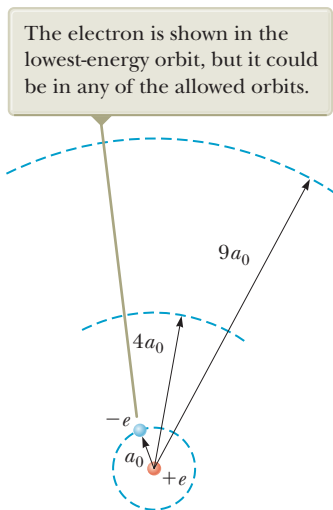


Figure 42.7 The first three circular orbits predicted by the Bohr model of the hydrogen atom.

Bohr radius ►

Radii of Bohr orbits in hydrogen ►

¹Compare Equation 42.9 with its gravitational counterpart, Equation 13.19.

Only energies satisfying this equation are permitted. The lowest allowed energy level, the ground state, has $n = 1$ and energy $E_1 = -13.606$ eV. The next energy level, the first excited state, has $n = 2$ and energy $E_2 = E_1/2^2 = -3.401$ eV. Figure 42.8 is an energy-level diagram showing the energies of these discrete energy states and the corresponding quantum numbers n . The uppermost level corresponds to $n = \infty$ (or $r = \infty$) and $E = 0$.

Notice how the allowed energies of the hydrogen atom differ from those of the particle in a box. The particle-in-a-box energies (Eq. 41.14) increase as n^2 , so they become farther apart in energy as n increases. On the other hand, the energies of the hydrogen atom (Eq. 42.14) are inversely proportional to n^2 , so their separation in energy becomes smaller as n increases. The separation between energy levels approaches zero as n approaches infinity and the energy approaches zero.

Zero energy represents the boundary between a bound system of an electron and a proton and an unbound system. If the energy of the atom is raised from that of the ground state to any energy larger than zero, the atom is **ionized**. The minimum energy required to ionize the atom in its ground state is called the **ionization energy**. As can be seen from Figure 42.8, the ionization energy for hydrogen in the ground state, based on Bohr's calculation, is 13.6 eV. This finding constituted another major achievement for the Bohr theory because the ionization energy for hydrogen had already been measured to be 13.6 eV.

Equations 42.5 and 42.13 can be used to calculate the frequency of the photon emitted when the electron makes a transition from an outer orbit to an inner orbit:

$$f = \frac{E_i - E_f}{h} = \frac{k_e e^2}{2a_0 h} \left(\frac{1}{n_f^2} - \frac{1}{n_i^2} \right) \quad (42.15)$$

Because the quantity measured experimentally is wavelength, it is convenient to use $c = f\lambda$ to express Equation 42.15 in terms of wavelength:

$$\frac{1}{\lambda} = \frac{f}{c} = \frac{k_e e^2}{2a_0 hc} \left(\frac{1}{n_f^2} - \frac{1}{n_i^2} \right) \quad (42.16)$$

Remarkably, this expression, which is purely theoretical, is *identical* to the general form of the empirical relationships discovered by Balmer and Rydberg and given by Equations 42.1 to 42.4:

$$\frac{1}{\lambda} = R_H \left(\frac{1}{n_f^2} - \frac{1}{n_i^2} \right) \quad (42.17)$$

provided the constant $k_e e^2 / 2a_0 hc$ is equal to the experimentally determined Rydberg constant. Soon after Bohr demonstrated that these two quantities agree to within approximately 1%, this work was recognized as the crowning achievement of his new quantum theory of the hydrogen atom. Furthermore, Bohr showed that all the spectral series for hydrogen have a natural interpretation in his theory. The different series correspond to transitions to different final states characterized by the quantum number n_f . Figure 42.8 shows the origin of these spectral series as transitions between energy levels.

Bohr extended his model for hydrogen to other elements in which all but one electron had been removed. These systems have the same structure as the hydrogen atom except that the nuclear charge is larger. Ionized elements such as He^+ , Li^{2+} , and Be^{3+} were suspected to exist in hot stellar atmospheres, where atomic collisions frequently have enough energy to completely remove one or more atomic electrons. Bohr showed that many mysterious lines observed in the spectra of the Sun and several other stars could not be due to hydrogen but were correctly predicted by his theory if attributed to singly ionized helium. In general, the number of protons in the nucleus of an atom is called the **atomic number** of the element

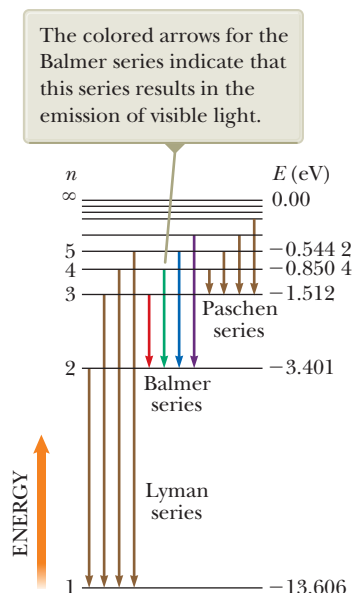


Figure 42.8 An energy-level diagram for the hydrogen atom. Quantum numbers are given on the left, and energies (in electron volts) are given on the right. Vertical arrows represent the four lowest-energy transitions for each of the spectral series shown.

Pitfall Prevention 42.2**The Bohr Model Is Great, but . . .**

The Bohr model correctly predicts the ionization energy and general features of the spectrum for hydrogen, but it cannot account for the spectra of more complex atoms and is unable to predict many subtle spectral details of hydrogen and other simple atoms. Scattering experiments show that the electron in a hydrogen atom does not move in a flat circle around the nucleus. Instead, the atom is spherical. The ground-state angular momentum of the atom is zero and not \hbar .

and is given the symbol Z . To describe a single electron orbiting a fixed nucleus of charge $+Ze$, Bohr's theory gives

$$r_n = (n^2) \frac{a_0}{Z} \quad (42.18)$$

$$E_n = -\frac{k_e e^2}{2a_0} \left(\frac{Z^2}{n^2} \right) \quad n = 1, 2, 3, \dots \quad (42.19)$$

Although the Bohr theory was triumphant in its agreement with some experimental results on the hydrogen atom, it suffered from some difficulties. One of the first indications that the Bohr theory needed to be modified arose when improved spectroscopic techniques were used to examine the spectral lines of hydrogen. It was found that many of the lines in the Balmer and other series were not single lines at all. Instead, each was a group of lines spaced very close together. An additional difficulty arose when it was observed that in some situations certain single spectral lines were split into three closely spaced lines when the atoms were placed in a strong magnetic field. Efforts to explain these and other deviations from the Bohr model led to modifications in the theory and ultimately to a replacement theory that will be discussed in Section 42.4.

Bohr's Correspondence Principle

In our study of relativity, we found that Newtonian mechanics is a special case of relativistic mechanics and is usable only for speeds much less than c . Similarly,

quantum physics agrees with classical physics when the difference between quantized levels becomes vanishingly small.

This principle, first set forth by Bohr, is called the **correspondence principle**.²

For example, consider an electron orbiting the hydrogen atom with $n > 10\,000$. For such large values of n , the energy differences between adjacent levels approach zero; therefore, the levels are nearly continuous. Consequently, the classical model is reasonably accurate in describing the system for large values of n . According to the classical picture, the frequency of the light emitted by the atom is equal to the frequency of revolution of the electron in its orbit about the nucleus. Calculations show that for $n > 10\,000$, this frequency is different from that predicted by quantum mechanics by less than 0.015%.

- Quick Quiz 42.1** A hydrogen atom is in its ground state. Incident on the atom is a photon having an energy of 10.5 eV. What is the result? (a) The atom is excited to a higher allowed state. (b) The atom is ionized. (c) The photon passes by the atom without interaction.
- Quick Quiz 42.2** A hydrogen atom makes a transition from the $n = 3$ level to the $n = 2$ level. It then makes a transition from the $n = 2$ level to the $n = 1$ level. Which transition results in emission of the longer-wavelength photon? (a) the first transition (b) the second transition (c) neither transition because the wavelengths are the same for both

Example 42.1**Electronic Transitions in Hydrogen**

(A) The electron in a hydrogen atom makes a transition from the $n = 2$ energy level to the ground level ($n = 1$). Find the wavelength and frequency of the emitted photon.

²In reality, the correspondence principle is the starting point for Bohr's property 2(c) on angular momentum quantization. To see how property 2(c) arises from the correspondence principle, see J. W. Jewett Jr., *Physics Begins with Another M . . . Mysteries, Magic, Myth, and Modern Physics* (Boston: Allyn & Bacon, 1996), pp. 353–356.

42.1 continued

SOLUTION

Conceptualize Imagine the electron in a circular orbit about the nucleus as in the Bohr model in Figure 42.6. When the electron makes a transition to a lower stationary state, it emits a photon with a given frequency and drops to a circular orbit of smaller radius.

Categorize We evaluate the results using equations developed in this section, so we categorize this example as a substitution problem.

Use Equation 42.17 to obtain λ , with $n_i = 2$ and $n_f = 1$:

$$\frac{1}{\lambda} = R_{\text{H}} \left(\frac{1}{1^2} - \frac{1}{2^2} \right) = \frac{3R_{\text{H}}}{4}$$

$$\lambda = \frac{4}{3R_{\text{H}}} = \frac{4}{3(1.097 \times 10^7 \text{ m}^{-1})} = 1.22 \times 10^{-7} \text{ m} = 122 \text{ nm}$$

Use Equation 34.20 to find the frequency of the photon:

$$f = \frac{c}{\lambda} = \frac{3.00 \times 10^8 \text{ m/s}}{1.22 \times 10^{-7} \text{ m}} = 2.47 \times 10^{15} \text{ Hz}$$

(B) In interstellar space, highly excited hydrogen atoms called Rydberg atoms have been observed. Find the wavelength to which radio astronomers must tune to detect signals from electrons dropping from the $n = 273$ level to the $n = 272$ level.

SOLUTION

Use Equation 42.17, this time with $n_i = 273$ and $n_f = 272$:

$$\frac{1}{\lambda} = R_{\text{H}} \left(\frac{1}{n_f^2} - \frac{1}{n_i^2} \right) = R_{\text{H}} \left(\frac{1}{(272)^2} - \frac{1}{(273)^2} \right) = 9.88 \times 10^{-8} R_{\text{H}}$$

Solve for λ :

$$\lambda = \frac{1}{9.88 \times 10^{-8} R_{\text{H}}} = \frac{1}{(9.88 \times 10^{-8})(1.097 \times 10^7 \text{ m}^{-1})} = 0.922 \text{ m}$$

(C) What is the radius of the electron orbit for a Rydberg atom for which $n = 273$?

SOLUTION

Use Equation 42.12 to find the radius of the orbit:

$$r_{273} = (273)^2 (0.0529 \text{ nm}) = 3.94 \mu\text{m}$$

This radius is large enough that the atom is on the verge of becoming macroscopic!

(D) How fast is the electron moving in a Rydberg atom for which $n = 273$?

SOLUTION

Solve Equation 42.8 for the electron's speed:

$$v = \sqrt{\frac{k_e e^2}{m_e r}} = \sqrt{\frac{(8.99 \times 10^9 \text{ N} \cdot \text{m}^2/\text{C}^2)(1.60 \times 10^{-19} \text{ C})^2}{(9.11 \times 10^{-31} \text{ kg})(3.94 \times 10^{-6} \text{ m})}}$$

$$= 8.01 \times 10^3 \text{ m/s}$$

WHAT IF? What if radiation from the Rydberg atom in part (B) is treated classically? What is the wavelength of radiation emitted by the atom in the $n = 273$ level?

Answer Classically, the frequency of the emitted radiation is that of the rotation of the electron around the nucleus.

Calculate this frequency using the period defined in Equation 4.15:

$$f = \frac{1}{T} = \frac{v}{2\pi r}$$

Substitute the radius and speed from parts (C) and (D):

$$f = \frac{v}{2\pi r} = \frac{8.02 \times 10^3 \text{ m/s}}{2\pi(3.94 \times 10^{-6} \text{ m})} = 3.24 \times 10^8 \text{ Hz}$$

Find the wavelength of the radiation from Equation 34.20:

$$\lambda = \frac{c}{f} = \frac{3.00 \times 10^8 \text{ m/s}}{3.24 \times 10^8 \text{ Hz}} = 0.927 \text{ m}$$

This value is about 0.5% different from the wavelength calculated in part (B). As indicated in the discussion of Bohr's correspondence principle, this difference becomes even smaller for higher values of n .

42.4 The Quantum Model of the Hydrogen Atom

In the preceding section, we described how the Bohr model views the electron as a particle orbiting the nucleus in nonradiating, quantized energy levels. This model combines both classical and quantum concepts. Although the model demonstrates excellent agreement with some experimental results, it cannot explain others. These difficulties are removed when a full quantum model involving the Schrödinger equation is used to describe the hydrogen atom.

The formal procedure for solving the problem of the hydrogen atom is to substitute the appropriate potential energy function into the Schrödinger equation, find solutions to the equation, and apply boundary conditions as we did for the particle in a box in Chapter 41. The potential energy function for the hydrogen atom is that due to the electrical interaction between the electron and the proton (see Section 25.3):

$$U(r) = -k_e \frac{e^2}{r} \quad (42.20)$$

where k_e is the Coulomb constant and r is the radial distance from the proton (situated at $r = 0$) to the electron.

The mathematics for the hydrogen atom is more complicated than that for the particle in a box for two primary reasons: (1) the atom is three-dimensional, and (2) U is not constant, but rather depends on the radial coordinate r . If the time-independent Schrödinger equation (Eq. 41.15) is extended to three-dimensional rectangular coordinates, the result is

$$-\frac{\hbar^2}{2m} \left(\frac{\partial^2 \psi}{\partial x^2} + \frac{\partial^2 \psi}{\partial y^2} + \frac{\partial^2 \psi}{\partial z^2} \right) + U\psi = E\psi$$

It is easier to solve this equation for the hydrogen atom if rectangular coordinates are converted to spherical polar coordinates, an extension of the plane polar coordinates introduced in Section 3.1. In spherical polar coordinates, a point in space is represented by the three variables r , θ , and ϕ , where r is the radial distance from the origin, $r = \sqrt{x^2 + y^2 + z^2}$. With the point represented at the end of a position vector \vec{r} as shown in Figure 42.9, the angular coordinate θ specifies its angular position relative to the z axis. Once that position vector is projected onto the xy plane, the angular coordinate ϕ specifies the projection's (and therefore the point's) angular position relative to the x axis.

The conversion of the three-dimensional time-independent Schrödinger equation for $\psi(x, y, z)$ to the equivalent form for $\psi(r, \theta, \phi)$ is straightforward but very tedious, so we omit the details.³ In Chapter 41, we separated the time dependence from the space dependence in the general wave function Ψ . In this case of the hydrogen atom, the three space variables in $\psi(r, \theta, \phi)$ can be similarly separated by writing the wave function as a product of functions of each single variable:

$$\psi(r, \theta, \phi) = R(r)f(\theta)g(\phi)$$

In this way, Schrödinger's equation, which is a three-dimensional partial differential equation, can be transformed into three separate ordinary differential equations: one for $R(r)$, one for $f(\theta)$, and one for $g(\phi)$. Each of these functions is subject to boundary conditions. For example, $R(r)$ must remain finite as $r \rightarrow 0$ and $r \rightarrow \infty$; furthermore, $g(\phi)$ must have the same value as $g(\phi + 2\pi)$.

The potential energy function given in Equation 42.20 depends *only* on the radial coordinate r and not on either of the angular coordinates; therefore, it appears only in the equation for $R(r)$. As a result, the equations for θ and ϕ are independent of the particular system and their solutions are valid for *any* system exhibiting rotation.

When the full set of boundary conditions is applied to all three functions, three different quantum numbers are found for each allowed state of the hydrogen atom,

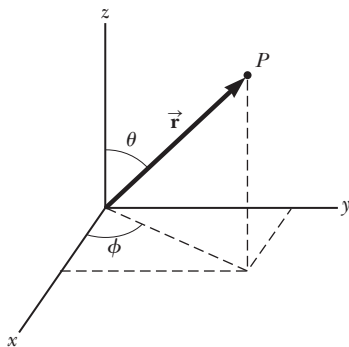


Figure 42.9 A point P in space is located by means of a position vector \vec{r} . In Cartesian coordinates, the components of this vector are x , y , and z . In spherical polar coordinates, the point is described by r , the distance from the origin; θ , the angle between \vec{r} and the z axis; and ϕ , the angle between the x axis and a projection of \vec{r} onto the xy plane.

³Descriptions of the solutions to the Schrödinger equation for the hydrogen atom are available in modern physics textbooks such as R. A. Serway, C. Moses, and C. A. Moyer, *Modern Physics*, 3rd ed. (Belmont, CA: Brooks/Cole, 2005).

one for each of the separate differential equations. These quantum numbers are restricted to integer values and correspond to the three independent degrees of freedom (three space dimensions).

The first quantum number, associated with the radial function $R(r)$ of the full wave function, is called the **principal quantum number** and is assigned the symbol n . The differential equation for $R(r)$ leads to functions giving the probability of finding the electron at a certain radial distance from the nucleus. In Section 42.5, we will describe two of these radial wave functions. From the boundary conditions, the energies of the allowed states for the hydrogen atom are found to be related to n as follows:

$$E_n = -\left(\frac{k_e e^2}{2a_0}\right) \frac{1}{n^2} = -\frac{13.606 \text{ eV}}{n^2} \quad n = 1, 2, 3, \dots \quad (42.21)$$

This result is in exact agreement with that obtained in the Bohr theory (Eqs. 42.13 and 42.14)! This agreement is *remarkable* because the Bohr theory and the full quantum theory arrive at the result from completely different starting points.

The **orbital quantum number**, symbolized ℓ , comes from the differential equation for $f(\theta)$ and is associated with the orbital angular momentum of the electron. The **orbital magnetic quantum number** m_ℓ arises from the differential equation for $g(\phi)$. Both ℓ and m_ℓ are integers. We will expand our discussion of these two quantum numbers in Section 42.6, where we also introduce a fourth (nonintegral) quantum number, resulting from a relativistic treatment of the hydrogen atom.

The application of boundary conditions on the three parts of the full wave function leads to important relationships among the three quantum numbers as well as certain restrictions on their values:

The values of n are integers that can range from 1 to ∞ .

The values of ℓ are integers that can range from 0 to $n - 1$.

The values of m_ℓ are integers that can range from $-\ell$ to ℓ .

For example, if $n = 1$, only $\ell = 0$ and $m_\ell = 0$ are permitted. If $n = 2$, then ℓ may be 0 or 1; if $\ell = 0$, then $m_\ell = 0$; but if $\ell = 1$, then m_ℓ may be 1, 0, or -1 . Table 42.1 summarizes the rules for determining the allowed values of ℓ and m_ℓ for a given n .

For historical reasons, all states having the same principal quantum number are said to form a **shell**. Shells are identified by the letters K, L, M, . . . , which designate the states for which $n = 1, 2, 3, \dots$. Likewise, all states having the same values of n and ℓ are said to form a **subshell**. The letters⁴ s, p, d, f, g, h, \dots are used to designate the subshells for which $\ell = 0, 1, 2, 3, \dots$. The state designated by $3p$, for example, has the quantum numbers $n = 3$ and $\ell = 1$; the $2s$ state has the quantum numbers $n = 2$ and $\ell = 0$. These notations are summarized in Tables 42.2 and 42.3 (page 1308).

States that violate the rules given in Table 42.1 do not exist. (They do not satisfy the boundary conditions on the wave function.) For instance, the $2d$ state, which

Table 42.1 Three Quantum Numbers for the Hydrogen Atom

Quantum Number	Name	Allowed Values	Number of Allowed States
n	Principal quantum number	1, 2, 3, . . .	Any number
ℓ	Orbital quantum number	0, 1, 2, . . . , $n - 1$	n
m_ℓ	Orbital magnetic quantum number	$-\ell, -\ell + 1, \dots, 0, \dots, \ell - 1, \ell$	$2\ell + 1$

⁴The first four of these letters come from early classifications of spectral lines: sharp, principal, diffuse, and fundamental. The remaining letters are in alphabetical order.

◀ Allowed energies of the quantum hydrogen atom

Pitfall Prevention 42.3

Energy Depends on n Only for Hydrogen The implication in Equation 42.21 that the energy depends only on the quantum number n is true only for the hydrogen atom. For more complicated atoms, we will use the same quantum numbers developed here for hydrogen. The energy levels for these atoms depend primarily on n , but they also depend to a lesser degree on other quantum numbers.

◀ Restrictions on the values of hydrogen-atom quantum numbers

Pitfall Prevention 42.4

Quantum Numbers Describe a System It is common to assign the quantum numbers to an electron. Remember, however, that these quantum numbers arise from the Schrödinger equation, which involves a potential energy function for the *system* of the electron and the nucleus. Therefore, it is more *proper* to assign the quantum numbers to the atom, but it is more *popular* to assign them to an electron. We follow this latter usage because it is so common.

Table 42.2 Atomic Shell Notations

n	Shell Symbol
1	K
2	L
3	M
4	N
5	O
6	P

Table 42.3 Atomic Subshell Notations

ℓ	Subshell Symbol
0	<i>s</i>
1	<i>p</i>
2	<i>d</i>
3	<i>f</i>
4	<i>g</i>
5	<i>h</i>

would have $n = 2$ and $\ell = 2$, cannot exist because the highest allowed value of ℓ is $n - 1$, which in this case is 1. Therefore, for $n = 2$, the $2s$ and $2p$ states are allowed but $2d, 2f, \dots$ are not. For $n = 3$, the allowed subshells are $3s, 3p$, and $3d$.

Quick Quiz 42.3 How many possible subshells are there for the $n = 4$ level of hydrogen? (a) 5 (b) 4 (c) 3 (d) 2 (e) 1

Quick Quiz 42.4 When the principal quantum number is $n = 5$, how many different values of (a) ℓ and (b) m_ℓ are possible?

Example 42.2 The $n = 2$ Level of Hydrogen

For a hydrogen atom, determine the allowed states corresponding to the principal quantum number $n = 2$ and calculate the energies of these states.

SOLUTION

Conceptualize Think about the atom in the $n = 2$ quantum state. There is only one such state in the Bohr theory, but our discussion of the quantum theory allows for more states because of the possible values of ℓ and m_ℓ .

Categorize We evaluate the results using rules discussed in this section, so we categorize this example as a substitution problem.

From Table 42.1, we find that when $n = 2$, ℓ can be 0 or 1. Find the possible values of m_ℓ from Table 42.1:

$$\ell = 0 \rightarrow m_\ell = 0$$

$$\ell = 1 \rightarrow m_\ell = -1, 0, \text{ or } 1$$

Hence, we have one state, designated as the $2s$ state, that is associated with the quantum numbers $n = 2$, $\ell = 0$, and $m_\ell = 0$, and we have three states, designated as $2p$ states, for which the quantum numbers are $n = 2$, $\ell = 1$, and $m_\ell = -1$; $n = 2$, $\ell = 1$, and $m_\ell = 0$; and $n = 2$, $\ell = 1$, and $m_\ell = 1$.

Find the energy for all four of these states with $n = 2$ from Equation 42.21:

$$E_2 = -\frac{13.606 \text{ eV}}{2^2} = -3.401 \text{ eV}$$

42.5 The Wave Functions for Hydrogen

Because the potential energy of the hydrogen atom depends only on the radial distance r between nucleus and electron, some of the allowed states for this atom can be represented by wave functions that depend only on r . For these states, $f(\theta)$ and $g(\phi)$ are constants. The simplest wave function for hydrogen is the one that describes the $1s$ state and is designated $\psi_{1s}(r)$:

$$\psi_{1s}(r) = \frac{1}{\sqrt{\pi a_0^3}} e^{-r/a_0} \quad (42.22)$$

Wave function for hydrogen in its ground state

where a_0 is the Bohr radius. (In Problem 26, you can verify that this function satisfies the Schrödinger equation.) Note that ψ_{1s} approaches zero as r approaches ∞ and is normalized as presented (see Eq. 41.7). Furthermore, because ψ_{1s} depends only on r , it is *spherically symmetric*. This symmetry exists for all s states.

Recall that the probability of finding a particle in any region is equal to an integral of the probability density $|\psi|^2$ for the particle over the region. The probability density for the $1s$ state is

$$|\psi_{1s}|^2 = \left(\frac{1}{\pi a_0^3} \right) e^{-2r/a_0} \quad (42.23)$$

Because we imagine the nucleus to be fixed in space at $r = 0$, we can assign this probability density to the question of locating the electron. According to Equation 41.3, the probability of finding the electron in a volume element dV is $|\psi|^2 dV$. It is convenient to define the *radial probability density function* $P(r)$ as the probability per unit radial length of finding the electron in a spherical shell of radius r and thickness dr . Therefore, $P(r) dr$ is the probability of finding the electron in this shell. The volume dV of such an infinitesimally thin shell equals its surface area $4\pi r^2$ multiplied by the shell thickness dr (Fig. 42.10), so we can write this probability as

$$P(r) dr = |\psi|^2 dV = |\psi|^2 4\pi r^2 dr$$

Therefore, the radial probability density function for an s state is

$$P(r) = 4\pi r^2 |\psi|^2 \quad (42.24)$$

Substituting Equation 42.23 into Equation 42.24 gives the radial probability density function for the hydrogen atom in its ground state:

$$P_{1s}(r) = \left(\frac{4r^2}{a_0^3}\right) e^{-2r/a_0} \quad (42.25)$$

A plot of the function $P_{1s}(r)$ versus r is presented in Figure 42.11a. The peak of the curve corresponds to the most probable value of r for this particular state. We show in Example 42.3 that this peak occurs at the Bohr radius, the radial position of the electron when the hydrogen atom is in its ground state in the Bohr theory, another remarkable agreement between the Bohr theory and the quantum theory.

According to quantum mechanics, the atom has no sharply defined boundary as suggested by the Bohr theory. The probability distribution in Figure 42.11a suggests that the charge of the electron can be modeled as being extended throughout a region of space, commonly referred to as an *electron cloud*. Figure 42.11b shows the probability density of the electron in a hydrogen atom in the $1s$ state as a function of position in the xy plane. The darkness of the blue color corresponds to the value of the probability density. The darkest portion of the distribution appears at $r = a_0$, corresponding to the most probable value of r for the electron.

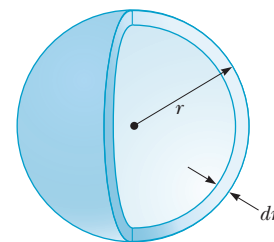
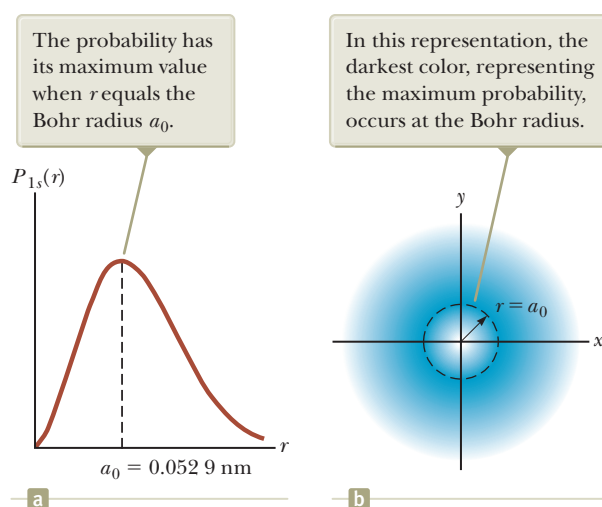


Figure 42.10 A spherical shell of radius r and infinitesimal thickness dr has a volume equal to $4\pi r^2 dr$.

◀ **Radial probability density for the $1s$ state of hydrogen**

Figure 42.11 (a) The probability of finding the electron as a function of distance from the nucleus for the hydrogen atom in the $1s$ (ground) state. (b) The cross section in the xy plane of the spherical electronic charge distribution for the hydrogen atom in its $1s$ state.

Example 42.3 The Ground State of Hydrogen

(A) Calculate the most probable value of r for an electron in the ground state of the hydrogen atom.

continued

▶ 42.3 continued

SOLUTION

Conceptualize Do not imagine the electron in orbit around the proton as in the Bohr theory of the hydrogen atom. Instead, imagine the charge of the electron spread out in space around the proton in an electron cloud with spherical symmetry.

Categorize Because the statement of the problem asks for the “most probable value of r ,” we categorize this example as a problem in which the quantum approach is used. (In the Bohr atom, the electron moves in an orbit with an *exact* value of r .)

Analyze The most probable value of r corresponds to the maximum in the plot of $P_{1s}(r)$ versus r . We can evaluate the most probable value of r by setting $dP_{1s}/dr = 0$ and solving for r .

Differentiate Equation 42.25 and set the result equal to zero:

$$\frac{dP_{1s}}{dr} = \frac{d}{dr} \left[\left(\frac{4r^2}{a_0^3} \right) e^{-2r/a_0} \right] = 0$$

$$e^{-2r/a_0} \frac{d}{dr} (r^2) + r^2 \frac{d}{dr} (e^{-2r/a_0}) = 0$$

$$2re^{-2r/a_0} + r^2(-2/a_0)e^{-2r/a_0} = 0$$

$$(1) \quad 2r[1 - (r/a_0)]e^{-2r/a_0} = 0$$

Set the bracketed expression equal to zero and solve for r :

$$1 - \frac{r}{a_0} = 0 \rightarrow r = a_0$$

Finalize The most probable value of r is the Bohr radius! Equation (1) is also satisfied at $r = 0$ and as $r \rightarrow \infty$. These points are locations of the *minimum* probability, which is equal to zero as seen in Figure 42.11a.

(B) Calculate the probability that the electron in the ground state of hydrogen will be found outside the Bohr radius.

SOLUTION

Analyze The probability is found by integrating the radial probability density function $P_{1s}(r)$ for this state from the Bohr radius a_0 to ∞ .

Set up this integral using Equation 42.25:

$$P = \int_{a_0}^{\infty} P_{1s}(r) dr = \frac{4}{a_0^3} \int_{a_0}^{\infty} r^2 e^{-2r/a_0} dr$$

Put the integral in dimensionless form by changing variables from r to $z = 2r/a_0$, noting that $z = 2$ when $r = a_0$ and that $dr = (a_0/2) dz$:

$$P = \frac{4}{a_0^3} \int_2^{\infty} \left(\frac{za_0}{2} \right)^2 e^{-z} \left(\frac{a_0}{2} \right) dz = \frac{1}{2} \int_2^{\infty} z^2 e^{-z} dz$$

Evaluate the integral using partial integration (see Appendix B.7):

$$P = -\frac{1}{2}(z^2 + 2z + 2)e^{-z} \Big|_2^{\infty}$$

Evaluate between the limits:

$$P = 0 - \left[-\frac{1}{2}(4 + 4 + 2)e^{-2} \right] = 5e^{-2} = 0.677 \text{ or } 67.7\%$$

Finalize This probability is larger than 50%. The reason for this value is the asymmetry in the radial probability density function (Fig. 42.11a), which has more area to the right of the peak than to the left.

WHAT IF? What if you were asked for the *average* value of r for the electron in the ground state rather than the most probable value?

Answer The average value of r is the same as the expectation value for r .

Use Equation 42.25 to evaluate the average value of r :

$$r_{\text{avg}} = \langle r \rangle = \int_0^{\infty} rP(r) dr = \int_0^{\infty} r \left(\frac{4r^2}{a_0^3} \right) e^{-2r/a_0} dr$$

$$= \left(\frac{4}{a_0^3} \right) \int_0^{\infty} r^3 e^{-2r/a_0} dr$$

▶ 42.3 continued

Evaluate the integral with the help of the first integral listed in Table B.6 in Appendix B:

$$r_{\text{avg}} = \left(\frac{4}{a_0^3}\right)\left(\frac{3!}{(2/a_0)^4}\right) = \frac{3}{2}a_0$$

Again, the average value is larger than the most probable value because of the asymmetry in the wave function as seen in Figure 42.11a.

The next-simplest wave function for the hydrogen atom is the one corresponding to the $2s$ state ($n = 2$, $\ell = 0$). The normalized wave function for this state is

$$\psi_{2s}(r) = \frac{1}{4\sqrt{2\pi}} \left(\frac{1}{a_0}\right)^{3/2} \left(2 - \frac{r}{a_0}\right) e^{-r/2a_0} \quad (42.26)$$

Again notice that ψ_{2s} depends only on r and is spherically symmetric. The energy corresponding to this state is $E_2 = -(13.606/4) \text{ eV} = -3.401 \text{ eV}$. This energy level represents the first excited state of hydrogen. A plot of the radial probability density function for this state in comparison to the $1s$ state is shown in Figure 42.12. The plot for the $2s$ state has two peaks. In this case, the most probable value corresponds to that value of r that has the highest value of P ($\approx 5a_0$). An electron in the $2s$ state would be much farther from the nucleus (on the average) than an electron in the $1s$ state.

42.6 Physical Interpretation of the Quantum Numbers

The principal quantum number n of a particular state in the hydrogen atom determines the energy of the atom according to Equation 42.21. Now let's see what the other quantum numbers in our atomic model correspond to physically.

The Orbital Quantum Number ℓ

We begin this discussion by returning briefly to the Bohr model of the atom. If the electron moves in a circle of radius r , the magnitude of its angular momentum relative to the center of the circle is $L = m_e v r$. The direction of \vec{L} is perpendicular to the plane of the circle and is given by a right-hand rule. According to classical physics, the magnitude L of the orbital angular momentum can have any value. The Bohr model of hydrogen, however, postulates that the magnitude of the angular momentum of the electron is restricted to multiples of \hbar ; that is, $L = n\hbar$. This model must be modified because it predicts (incorrectly) that the ground state of hydrogen has one unit of angular momentum. Furthermore, if L is taken to be zero in the Bohr model, the electron must be pictured as a particle oscillating along a straight line through the nucleus, which is a physically unacceptable situation.

These difficulties are resolved with the quantum-mechanical model of the atom, although we must give up the convenient mental representation of an electron orbiting in a well-defined circular path. Despite the absence of this representation, the atom does indeed possess an angular momentum and it is still called orbital angular momentum. According to quantum mechanics, an atom in a state whose principal quantum number is n can take on the following *discrete* values of the magnitude of the orbital angular momentum:⁵

$$L = \sqrt{\ell(\ell + 1)}\hbar \quad \ell = 0, 1, 2, \dots, n - 1 \quad (42.27)$$

⁵Equation 42.27 is a direct result of the mathematical solution of the Schrödinger equation and the application of angular boundary conditions. This development, however, is beyond the scope of this book.

◀ Wave function for hydrogen in the $2s$ state

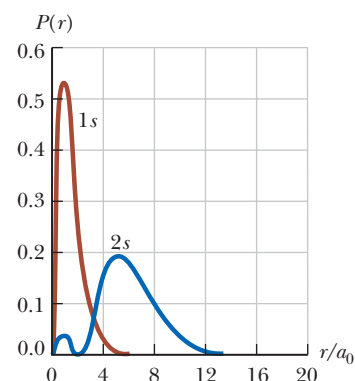


Figure 42.12 The radial probability density function versus r/a_0 for the $1s$ and $2s$ states of the hydrogen atom.

◀ Allowed values of L

Given these allowed values of ℓ , we see that $L = 0$ (corresponding to $\ell = 0$) is an acceptable value of the magnitude of the angular momentum. That L can be zero in this model serves to point out the inherent difficulties in any attempt to describe results based on quantum mechanics in terms of a purely particle-like (classical) model. In the quantum-mechanical interpretation, the electron cloud for the $L = 0$ state is spherically symmetric and has no fundamental rotation axis.

The Orbital Magnetic Quantum Number m_ℓ

Because angular momentum is a vector, its direction must be specified. Recall from Chapter 29 that a current loop has a corresponding magnetic moment $\vec{\mu} = I\vec{A}$ (Eq. 29.15), where I is the current in the loop and \vec{A} is a vector perpendicular to the loop whose magnitude is the area of the loop. Such a moment placed in a magnetic field \vec{B} interacts with the field. Suppose a weak magnetic field applied along the z axis defines a direction in space. According to classical physics, the energy of the loop–field system depends on the direction of the magnetic moment of the loop with respect to the magnetic field as described by Equation 29.18, $U_B = -\vec{\mu} \cdot \vec{B}$. Any energy between $-\mu B$ and $+\mu B$ is allowed by classical physics.

In the Bohr theory, the circulating electron represents a current loop. In the quantum-mechanical approach to the hydrogen atom, we abandon the circular orbit viewpoint of the Bohr theory, but the atom still possesses an orbital angular momentum. Therefore, there is some sense of rotation of the electron around the nucleus and a magnetic moment is present due to this angular momentum.

As mentioned in Section 42.3, spectral lines from some atoms are observed to split into groups of three closely spaced lines when the atoms are placed in a magnetic field. Suppose the hydrogen atom is located in a magnetic field. According to quantum mechanics, there are *discrete* directions allowed for the magnetic moment vector $\vec{\mu}$ with respect to the magnetic field vector \vec{B} . This situation is very different from that in classical physics, in which all directions are allowed.

Because the magnetic moment $\vec{\mu}$ of the atom can be related⁶ to the angular momentum vector \vec{L} , the discrete directions of $\vec{\mu}$ translate to the direction of \vec{L} being quantized. This quantization means that L_z (the projection of \vec{L} along the z axis) can have only discrete values. The orbital magnetic quantum number m_ℓ specifies the allowed values of the z component of the orbital angular momentum according to the expression⁷

Allowed values of L_z ►

$$L_z = m_\ell \hbar \quad (42.28)$$

The quantization of the possible orientations of \vec{L} with respect to an external magnetic field is often referred to as **space quantization**.

Let's look at the possible magnitudes and orientations of \vec{L} for a given value of ℓ . Recall that m_ℓ can have values ranging from $-\ell$ to ℓ . If $\ell = 0$, then $L = 0$; the only allowed value of m_ℓ is $m_\ell = 0$ and $L_z = 0$. If $\ell = 1$, then $L = \sqrt{2}\hbar$ from Equation 42.27. The possible values of m_ℓ are -1 , 0 , and 1 , so Equation 42.28 tells us that L_z may be $-\hbar$, 0 , or \hbar . If $\ell = 2$, the magnitude of the orbital angular momentum is $\sqrt{6}\hbar$. The value of m_ℓ can be -2 , -1 , 0 , 1 , or 2 , corresponding to L_z values of $-2\hbar$, $-\hbar$, 0 , \hbar , or $2\hbar$, and so on.

Figure 42.13a shows a **vector model** that describes space quantization for the case $\ell = 2$. Notice that \vec{L} can never be aligned parallel or antiparallel to \vec{B} because the maximum value of L_z is $\ell\hbar$, which is less than the magnitude of the angular momentum $L = \sqrt{\ell(\ell + 1)}\hbar$. The angular momentum vector \vec{L} is allowed to be perpendicular to \vec{B} , which corresponds to the case of $L_z = 0$ and $\ell = 0$.

⁶See Equation 30.22 for this relationship as derived from a classical viewpoint. Quantum mechanics arrives at the same result.

⁷As with Equation 42.27, the relationship expressed in Equation 42.28 arises from the solution to the Schrödinger equation and application of boundary conditions.

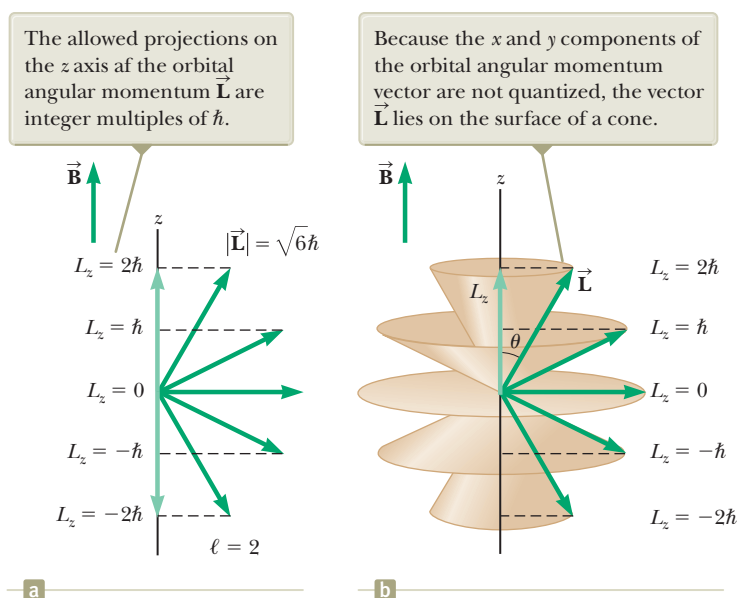


Figure 42.13 A vector model for $\ell = 2$.

The vector \vec{L} does not point in one specific direction. If \vec{L} were known exactly, all three components L_x , L_y , and L_z would be specified, which is inconsistent with an angular momentum version of the uncertainty principle. How can the magnitude and z component of a vector be specified, but the vector not be completely specified? To answer, imagine that L_x and L_y are completely unspecified so that \vec{L} lies anywhere on the surface of a cone that makes an angle θ with the z axis as shown in Figure 42.13b. From the figure, we see that θ is also quantized and that its values are specified through the relationship

$$\cos \theta = \frac{L_z}{L} = \frac{m_\ell}{\sqrt{\ell(\ell + 1)}} \quad (42.29)$$

If the atom is placed in a magnetic field, the energy $U_B = -\vec{\mu} \cdot \vec{B}$ is additional energy for the atom–field system beyond that described in Equation 42.21. Because the directions of $\vec{\mu}$ are quantized, there are discrete total energies for the system corresponding to different values of m_ℓ . Figure 42.14a shows a transition between two atomic levels in the absence of a magnetic field. In Figure 42.14b, a magnetic

Allowed directions of the orbital angular momentum vector

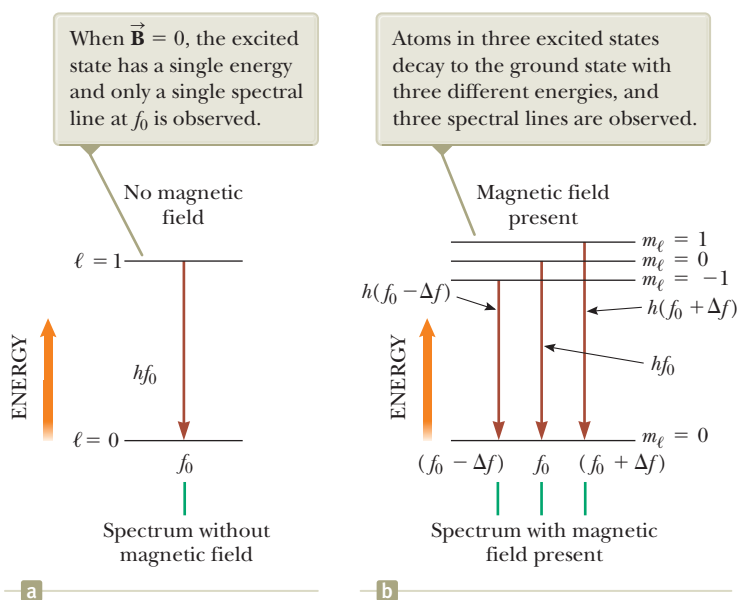


Figure 42.14 The Zeeman effect. (a) Energy levels for the ground and first excited states of a hydrogen atom. (b) When the atom is immersed in a magnetic field \vec{B} , the state with $\ell = 1$ splits into three states, giving rise to emission lines at $f_0 + \Delta f$, and $f_0 - \Delta f$, where Δf is the frequency shift of the emission caused by the magnetic field.

field is applied and the upper level, with $\ell = 1$, splits into three levels corresponding to the different directions of $\vec{\mu}$. There are now three possible transitions from the $\ell = 1$ subshell to the $\ell = 0$ subshell. Therefore, in a collection of atoms, there are atoms in all three states and the single spectral line in Figure 42.14a splits into three spectral lines. This phenomenon is called the *Zeeman effect*.

The Zeeman effect can be used to measure extraterrestrial magnetic fields. For example, the splitting of spectral lines in light from hydrogen atoms in the surface of the Sun can be used to calculate the magnitude of the magnetic field at that location. The Zeeman effect is one of many phenomena that cannot be explained with the Bohr model but are successfully explained by the quantum model of the atom.

Example 42.4 Space Quantization for Hydrogen

Consider the hydrogen atom in the $\ell = 3$ state. Calculate the magnitude of \vec{L} , the allowed values of L_z , and the corresponding angles θ that \vec{L} makes with the z axis.

SOLUTION

Conceptualize Consider Figure 42.13a, which is a vector model for $\ell = 2$. Draw such a vector model for $\ell = 3$ to help with this problem.

Categorize We evaluate results using equations developed in this section, so we categorize this example as a substitution problem.

Calculate the magnitude of the orbital angular momentum using Equation 42.27:

$$L = \sqrt{\ell(\ell + 1)}\hbar = \sqrt{3(3 + 1)}\hbar = 2\sqrt{3}\hbar$$

Calculate the allowed values of L_z using Equation 42.28 with $m_\ell = -3, -2, -1, 0, 1, 2,$ and 3 :

$$L_z = -3\hbar, -2\hbar, -\hbar, 0, \hbar, 2\hbar, 3\hbar$$

Calculate the allowed values of $\cos \theta$ using Equation 42.29:

$$\cos \theta = \frac{\pm 3}{2\sqrt{3}} = \pm 0.866 \quad \cos \theta = \frac{\pm 2}{2\sqrt{3}} = \pm 0.577$$

$$\cos \theta = \frac{\pm 1}{2\sqrt{3}} = \pm 0.289 \quad \cos \theta = \frac{0}{2\sqrt{3}} = 0$$

Find the angles corresponding to these values of $\cos \theta$:

$$\theta = 30.0^\circ, 54.7^\circ, 73.2^\circ, 90.0^\circ, 107^\circ, 125^\circ, 150^\circ$$

WHAT IF? What if the value of ℓ is an arbitrary integer? For an arbitrary value of ℓ , how many values of m_ℓ are allowed?

Answer For a given value of ℓ , the values of m_ℓ range from $-\ell$ to $+\ell$ in steps of 1. Therefore, there are 2ℓ nonzero values of m_ℓ (specifically, $\pm 1, \pm 2, \dots, \pm \ell$). In addition, one more value of $m_\ell = 0$ is possible, for a total of $2\ell + 1$ values of m_ℓ . This result is critical in understanding the results of the Stern–Gerlach experiment described below with regard to spin.



MARGARETHE BOHR COLLECTION
Photo Researchers, Inc.

Wolfgang Pauli and Niels Bohr watch a spinning top. The spin of the electron is analogous to the spin of the top but is different in many ways.

The Spin Magnetic Quantum Number m_s

The three quantum numbers n , ℓ , and m_ℓ discussed so far are generated by applying boundary conditions to solutions of the Schrödinger equation, and we can assign a physical interpretation to each quantum number. Let's now consider **electron spin**, which does *not* come from the Schrödinger equation.

In Example 42.2, we found four quantum states corresponding to $n = 2$. In reality, however, eight such states occur. The additional four states can be explained by requiring a fourth quantum number for each state, the **spin magnetic quantum number m_s** .

The need for this new quantum number arises because of an unusual feature observed in the spectra of certain gases, such as sodium vapor. Close examination of one prominent line in the emission spectrum of sodium reveals that the

line is, in fact, two closely spaced lines called a *doublet*.⁸ The wavelengths of these lines occur in the yellow region of the electromagnetic spectrum at 589.0 nm and 589.6 nm. In 1925, when this doublet was first observed, it could not be explained with the existing atomic theory. To resolve this dilemma, Samuel Goudsmit (1902–1978) and George Uhlenbeck (1900–1988), following a suggestion made by Austrian physicist Wolfgang Pauli, proposed the spin quantum number.

To describe this new quantum number, it is convenient (but technically incorrect) to imagine the electron spinning about its axis as it orbits the nucleus as described in Section 30.6. As illustrated in Figure 42.15, only two directions exist for the electron spin. If the direction of spin is as shown in Figure 42.15a, the electron is said to have *spin up*. If the direction of spin is as shown in Figure 42.15b, the electron is said to have *spin down*. In the presence of a magnetic field, the energy associated with the electron is slightly different for the two spin directions. This energy difference accounts for the sodium doublet.

The classical description of electron spin—as resulting from a spinning electron—is incorrect. More recent theory indicates that the electron is a point particle, without spatial extent. Therefore, the electron is not modeled as a rigid object and cannot be considered to be spinning. Despite this conceptual difficulty, all experimental evidence supports the idea that an electron does have some intrinsic angular momentum that can be described by the spin magnetic quantum number. Paul Dirac (1902–1984) showed that this fourth quantum number originates in the relativistic properties of the electron.

In 1921, Otto Stern (1888–1969) and Walter Gerlach (1889–1979) performed an experiment that demonstrated space quantization. Their results, however, were not in quantitative agreement with the atomic theory that existed at that time. In their experiment, a beam of silver atoms sent through a nonuniform magnetic field was split into two discrete components (Fig. 42.16). Stern and Gerlach repeated the experiment using other atoms, and in each case the beam split into two or more components. The classical argument is as follows. If the z direction is chosen to be the direction of the maximum nonuniformity of $\vec{\mathbf{B}}$, the net magnetic force on the atoms is along the z axis and is proportional to the component of the magnetic moment $\vec{\mu}$ of the atom in the z direction. Classically, $\vec{\mu}$ can have any orientation, so the deflected beam should be spread out continuously. According to quantum mechanics, however, the deflected beam has an integral number of discrete components and the number of components determines the number of possible values of μ_z . Therefore, because the Stern–Gerlach experiment showed split beams, space quantization was at least qualitatively verified.

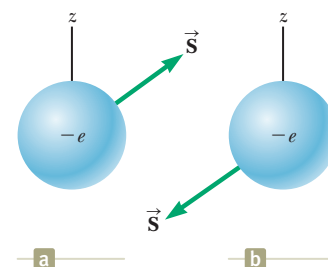


Figure 42.15 The spin of an electron can be either (a) up or (b) down relative to a specified z axis. As in the case of orbital angular momentum, the x and y components of the spin angular momentum vector are not quantized.

Pitfall Prevention 42.5

The Electron Is Not Spinning

Although the concept of a spinning electron is conceptually useful, it should not be taken literally. The spin of the Earth is a mechanical rotation. On the other hand, electron spin is a purely quantum effect that gives the electron an angular momentum as if it were physically spinning.

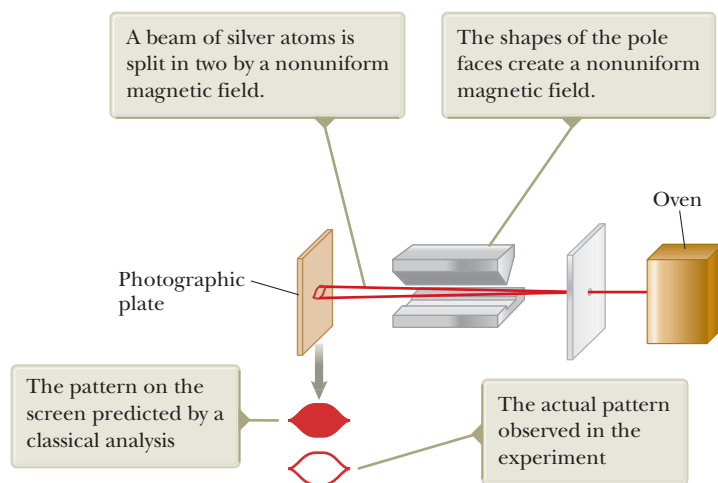


Figure 42.16 The technique used by Stern and Gerlach to verify space quantization.

⁸This phenomenon is a Zeeman effect for spin and is identical in nature to the Zeeman effect for orbital angular momentum discussed before Example 42.4 except that no external magnetic field is required. The magnetic field for this Zeeman effect is internal to the atom and arises from the relative motion of the electron and the nucleus.

For the moment, let's assume the magnetic moment of the atom is due to the orbital angular momentum. Because μ_z is proportional to m_ℓ , the number of possible values of μ_z is $2\ell + 1$ as found in the What If? section of Example 42.4. Furthermore, because ℓ is an integer, the number of values of μ_z is always odd. This prediction is not consistent with Stern and Gerlach's observation of two components (an *even* number) in the deflected beam of silver atoms. Hence, either quantum mechanics is incorrect or the model is in need of refinement.

In 1927, T. E. Phipps and J. B. Taylor repeated the Stern–Gerlach experiment using a beam of hydrogen atoms. Their experiment was important because it involved an atom containing a single electron in its ground state, for which the quantum theory makes reliable predictions. Recall that $\ell = 0$ for hydrogen in its ground state, so $m_\ell = 0$. Therefore, we would not expect the beam to be deflected by the magnetic field at all because the magnetic moment $\vec{\mu}$ of the atom is zero. The beam in the Phipps–Taylor experiment, however, was again split into two components! On the basis of that result, we must conclude that something other than the electron's orbital motion is contributing to the atomic magnetic moment.

As we learned earlier, Goudsmit and Uhlenbeck had proposed that the electron has an intrinsic angular momentum, spin, apart from its orbital angular momentum. In other words, the total angular momentum of the electron in a particular electronic state contains both an orbital contribution \vec{L} and a spin contribution \vec{S} . The Phipps–Taylor result confirmed the hypothesis of Goudsmit and Uhlenbeck.

In 1929, Dirac used the relativistic form of the total energy of a system to solve the relativistic wave equation for the electron in a potential well. His analysis confirmed the fundamental nature of electron spin. (Spin, like mass and charge, is an *intrinsic* property of a particle, independent of its surroundings.) Furthermore, the analysis showed that electron spin⁹ can be described by a single quantum number s , whose value can be only $s = \frac{1}{2}$. The spin angular momentum of the electron *never changes*. This notion contradicts classical laws, which dictate that a rotating charge slows down in the presence of an applied magnetic field because of the Faraday emf that accompanies the changing field (Chapter 31). Furthermore, if the electron is viewed as a spinning ball of charge subject to classical laws, parts of the electron near its surface would be rotating with speeds exceeding the speed of light. Therefore, the classical picture must not be pressed too far; ultimately, spin of an electron is a quantum entity defying any simple classical description.

Because spin is a form of angular momentum, it must follow the same quantum rules as orbital angular momentum. In accordance with Equation 42.27, the magnitude of the **spin angular momentum** \vec{S} for the electron is

$$S = \sqrt{s(s+1)}\hbar = \frac{\sqrt{3}}{2}\hbar \quad (42.30)$$

Magnitude of the spin angular
momentum of an electron ►

Like orbital angular momentum \vec{L} , spin angular momentum \vec{S} exhibits space quantization as described in Figure 42.17. The spin vector \vec{S} can have two orientations relative to a z axis, specified by the **spin magnetic quantum number** $m_s = \pm\frac{1}{2}$. Similar to Equation 42.28 for orbital angular momentum, the z component of spin angular momentum is

$$S_z = m_s\hbar = \pm\frac{1}{2}\hbar \quad (42.31)$$

Allowed values of S_z ►

The two values $\pm\hbar/2$ for S_z correspond to the two possible orientations for \vec{S} shown in Figure 42.17. The value $m_s = +\frac{1}{2}$ refers to the spin-up case, and $m_s = -\frac{1}{2}$ refers to the spin-down case. Notice that Equations 42.30 and 42.31 do not allow the spin vector to lie along the z axis. The actual direction of \vec{S} is at a relatively large angle with respect to the z axis as shown in Figures 42.15 and 42.17.

⁹Scientists often use the word *spin* when referring to the spin angular momentum quantum number. For example, it is common to say, "The electron has a spin of one half."

As discussed in the What If? feature of Example 42.4, there are $2\ell + 1$ possible values of m_ℓ for orbital angular momentum. Similarly, for spin angular momentum, there are $2s + 1$ values of m_s . For a spin of $s = \frac{1}{2}$, the number of values of m_s is $2s + 1 = 2$. These two possibilities for m_s lead to the splitting of the beams into two components in the Stern–Gerlach and Phipps–Taylor experiments.

The spin magnetic moment $\vec{\mu}_{\text{spin}}$ of the electron is related to its spin angular momentum \vec{S} by the expression

$$\vec{\mu}_{\text{spin}} = -\frac{e}{m_e} \vec{S} \quad (42.32)$$

where e is the electronic charge and m_e is the mass of the electron. Because $S_z = \pm \frac{1}{2}\hbar$, the z component of the spin magnetic moment can have the values

$$\mu_{\text{spin},z} = \pm \frac{e\hbar}{2m_e} \quad (42.33)$$

As we learned in Section 30.6, the quantity $e\hbar/2m_e$ is the Bohr magneton $\mu_B = 9.27 \times 10^{-24} \text{ J/T}$. The ratio of magnetic moment to angular momentum is twice as great for spin angular momentum (Eq. 42.32) as it is for orbital angular momentum (Eq. 30.22). The factor of 2 is explained in a relativistic treatment first carried out by Dirac.

Today, physicists explain the Stern–Gerlach and Phipps–Taylor experiments as follows. The observed magnetic moments for both silver and hydrogen are due to spin angular momentum only, with no contribution from orbital angular momentum. In the Phipps–Taylor experiment, the single electron in the hydrogen atom has its electron spin quantized in the magnetic field in such a way that the z component of spin angular momentum is either $\frac{1}{2}\hbar$ or $-\frac{1}{2}\hbar$, corresponding to $m_s = \pm \frac{1}{2}$. Electrons with spin $+\frac{1}{2}$ are deflected downward, and those with spin $-\frac{1}{2}$ are deflected upward. In the Stern–Gerlach experiment, 46 of a silver atom's 47 electrons are in filled subshells with paired spins. Therefore, these 46 electrons have a net zero contribution to both orbital and spin angular momentum for the atom. The angular momentum of the atom is due to only the 47th electron. This electron lies in the $5s$ subshell, so there is no contribution from orbital angular momentum. As a result, the silver atoms have angular momentum due to just the spin of one electron and behave in the same way in a nonuniform magnetic field as the hydrogen atoms in the Phipps–Taylor experiment.

The Stern–Gerlach experiment provided two important results. First, it verified the concept of space quantization. Second, it showed that spin angular momentum exists, even though this property was not recognized until four years after the experiments were performed.

As mentioned earlier, there are eight quantum states corresponding to $n = 2$ in the hydrogen atom, not four as found in Example 42.2. Each of the four states in Example 42.2 is actually two states because of the two possible values of m_s . Table 42.4 shows the quantum numbers corresponding to these eight states.

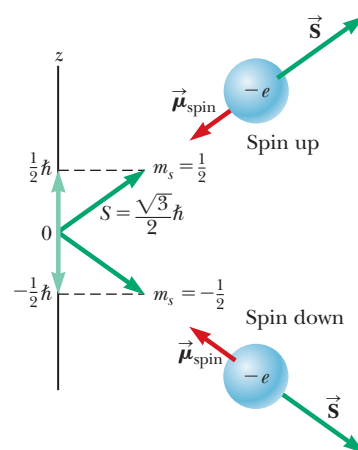


Figure 42.17 Spin angular momentum \vec{S} exhibits space quantization. This figure shows the two allowed orientations of the spin angular momentum vector \vec{S} and the spin magnetic moment $\vec{\mu}_{\text{spin}}$ for a spin- $\frac{1}{2}$ particle, such as the electron.

Table 42.4 Quantum Numbers for the $n = 2$ State of Hydrogen

n	ℓ	m_ℓ	m_s	Subshell	Shell	Number of States in Subshell
2	0	0	$\frac{1}{2}$	2s	L	2
2	0	0	$-\frac{1}{2}$			
2	1	1	$\frac{1}{2}$	2p	L	6
2	1	1	$-\frac{1}{2}$			
2	1	0	$\frac{1}{2}$			
2	1	0	$-\frac{1}{2}$			
2	1	-1	$\frac{1}{2}$			
2	1	-1	$-\frac{1}{2}$			

Atom	1s	2s	2p			Electronic configuration
Li						$1s^2 2s^1$
Be						$1s^2 2s^2$
B						$1s^2 2s^2 2p^1$
C						$1s^2 2s^2 2p^2$
N						$1s^2 2s^2 2p^3$
O						$1s^2 2s^2 2p^4$
F						$1s^2 2s^2 2p^5$
Ne						$1s^2 2s^2 2p^6$

Figure 42.18 The filling of electronic states must obey both the exclusion principle and Hund's rule (page 1320).

The exclusion principle can be illustrated by examining the electronic arrangement in a few of the lighter atoms. The atomic number Z of any element is the number of protons in the nucleus of an atom of that element. A neutral atom of that element has Z electrons. Hydrogen ($Z = 1$) has only one electron, which, in the ground state of the atom, can be described by either of two sets of quantum numbers n, ℓ, m_ℓ, m_s : $1, 0, 0, \frac{1}{2}$ or $1, 0, 0, -\frac{1}{2}$. This electronic configuration is often written $1s^1$. The notation $1s$ refers to a state for which $n = 1$ and $\ell = 0$, and the superscript indicates that one electron is present in the s subshell.

Helium ($Z = 2$) has two electrons. In the ground state, their quantum numbers are $1, 0, 0, \frac{1}{2}$ and $1, 0, 0, -\frac{1}{2}$. No other possible combinations of quantum numbers exist for this level, and we say that the K shell is filled. This electronic configuration is written $1s^2$.

Lithium ($Z = 3$) has three electrons. In the ground state, two of them are in the $1s$ subshell. The third is in the $2s$ subshell because this subshell is slightly lower in energy than the $2p$ subshell.¹⁰ Hence, the electronic configuration for lithium is $1s^2 2s^1$.

The electronic configurations of lithium and the next several elements are provided in Figure 42.18. The electronic configuration of beryllium ($Z = 4$), with its four electrons, is $1s^2 2s^2$, and boron ($Z = 5$) has a configuration of $1s^2 2s^2 2p^1$. The $2p$ electron in boron may be described by any of the six equally probable sets of quantum numbers listed in Table 42.4. In Figure 42.18, we show this electron in the leftmost $2p$ box with spin up, but it is equally likely to be in any $2p$ box with spin either up or down.

Carbon ($Z = 6$) has six electrons, giving rise to a question concerning how to assign the two $2p$ electrons. Do they go into the same orbital with paired spins ($\uparrow\downarrow$), or do they occupy different orbitals with unpaired spins ($\uparrow\uparrow$)? Experimental data show that the most stable configuration (that is, the one with the lowest energy) is the latter, in which the spins are unpaired. Hence, the two $2p$ electrons in carbon and the three $2p$ electrons in nitrogen ($Z = 7$) have unpaired spins as

¹⁰To a first approximation, energy depends only on the quantum number n , as we have discussed. Because of the effect of the electronic charge shielding the nuclear charge, however, energy depends on ℓ also in multielectron atoms. We shall discuss these shielding effects in Section 42.8.

Figure 42.18 shows. The general rule that governs such situations, called **Hund's rule**, states that

when an atom has orbitals of equal energy, the order in which they are filled by electrons is such that a maximum number of electrons have unpaired spins.

Some exceptions to this rule occur in elements having subshells that are close to being filled or half-filled.

In 1871, long before quantum mechanics was developed, the Russian chemist Dmitri Mendeleev (1834–1907) made an early attempt at finding some order among the chemical elements. He was trying to organize the elements for the table of contents of a book he was writing. He arranged the atoms in a table similar to that shown in Figure 42.19, according to their atomic masses and chemical similarities. The first table Mendeleev proposed contained many blank spaces, and he boldly stated that the gaps were there only because the elements had not yet been discovered. By noting the columns in which some missing elements should be located, he was able to make rough predictions about their chemical properties. Within 20 years of this announcement, most of these elements were indeed discovered.

The elements in the **periodic table** (Fig. 42.19) are arranged so that all those in a column have similar chemical properties. For example, consider the elements in the last column, which are all gases at room temperature: He (helium), Ne (neon), Ar (argon), Kr (krypton), Xe (xenon), and Rn (radon). The outstanding characteristic of all these elements is that they do not normally take part in chemical reactions; that is, they do not readily join with other atoms to form molecules. They are therefore called *inert gases* or *noble gases*.

Group I	Group II	Transition elements										Group III	Group IV	Group V	Group VI	Group VII	Group 0	
H 1 $1s^1$																	H 1 $1s^1$	He 2 $1s^2$
Li 3 $2s^1$	Be 4 $2s^2$											B 5 $2p^1$	C 6 $2p^2$	N 7 $2p^3$	O 8 $2p^4$	F 9 $2p^5$	Ne 10 $2p^6$	
Na 11 $3s^1$	Mg 12 $3s^2$											Al 13 $3p^1$	Si 14 $3p^2$	P 15 $3p^3$	S 16 $3p^4$	Cl 17 $3p^5$	Ar 18 $3p^6$	
K 19 $4s^1$	Ca 20 $4s^2$	Sc 21 $3d^14s^2$	Ti 22 $3d^24s^2$	V 23 $3d^34s^2$	Cr 24 $3d^54s^1$	Mn 25 $3d^54s^2$	Fe 26 $3d^64s^2$	Co 27 $3d^74s^2$	Ni 28 $3d^84s^2$	Cu 29 $3d^{10}4s^1$	Zn 30 $3d^{10}4s^2$	Ga 31 $4p^1$	Ge 32 $4p^2$	As 33 $4p^3$	Se 34 $4p^4$	Br 35 $4p^5$	Kr 36 $4p^6$	
Rb 37 $5s^1$	Sr 38 $5s^2$	Y 39 $4d^15s^2$	Zr 40 $4d^25s^2$	Nb 41 $4d^45s^1$	Mo 42 $4d^55s^1$	Tc 43 $4d^55s^2$	Ru 44 $4d^75s^1$	Rh 45 $4d^85s^1$	Pd 46 $4d^{10}$	Ag 47 $4d^{10}5s^1$	Cd 48 $4d^{10}5s^2$	In 49 $5p^1$	Sn 50 $5p^2$	Sb 51 $5p^3$	Te 52 $5p^4$	I 53 $5p^5$	Xe 54 $5p^6$	
Cs 55 $6s^1$	Ba 56 $6s^2$	57–71*	Hf 72 $5d^26s^2$	Ta 73 $5d^36s^2$	W 74 $5d^46s^2$	Re 75 $5d^56s^2$	Os 76 $5d^66s^2$	Ir 77 $5d^76s^2$	Pt 78 $5d^96s^1$	Au 79 $5d^{10}6s^1$	Hg 80 $5d^{10}6s^2$	Tl 81 $6p^1$	Pb 82 $6p^2$	Bi 83 $6p^3$	Po 84 $6p^4$	At 85 $6p^5$	Rn 86 $6p^6$	
Fr 87 $7s^1$	Ra 88 $7s^2$	89–103**	Rf 104 $6d^27s^2$	Db 105 $6d^37s^2$	Sg 106 $6d^47s^2$	Bh 107 $6d^57s^2$	Hs 108 $6d^67s^2$	Mt 109 $6d^77s^2$	Ds 110 $6d^97s^1$	Rg 111	Cn 112	113	Fl 114	115	Lv 116	117	118	
*Lanthanide series	La 57 $5d^16s^2$	Ce 58 $5d^14f^16s^2$	Pr 59 $4f^36s^2$	Nd 60 $4f^46s^2$	Pm 61	Sm 62 $4f^66s^2$	Eu 63 $4f^76s^2$	Gd 64 $5d^14f^76s^2$	Tb 65 $5d^14f^86s^2$	Dy 66 $4f^{10}6s^2$	Ho 67 $4f^{11}6s^2$	Er 68 $4f^{12}6s^2$	Tm 69 $4f^{13}6s^2$	Yb 70 $4f^{14}6s^2$	Lu 71 $5d^14f^{14}6s^2$			
**Actinide series	Ac 89 $6d^17s^2$	Th 90 $6d^27s^2$	Pa 91 $5f^26d^17s^2$	U 92 $5f^36d^17s^2$	Np 93 $5f^46d^17s^2$	Pu 94 $5f^67s^2$	Am 95 $5f^77s^2$	Cm 96 $5f^76d^17s^2$	Bk 97 $5f^86d^17s^2$	Cf 98 $5f^{10}7s^2$	Es 99 $5f^{11}7s^2$	Fm 100 $5f^{12}7s^2$	Md 101 $5f^{13}7s^2$	No 102 $5f^{14}7s^2$	Lr 103 $5f^{14}6d^17s^2$			

Figure 42.19 The periodic table of the elements is an organized tabular representation of the elements that shows their periodic chemical behavior. Elements in a given column have similar chemical behavior. This table shows the chemical symbol for the element, the atomic number, and the electron configuration. A more complete periodic table is available in Appendix C.

We can partially understand this behavior by looking at the electronic configurations in Figure 42.19. The chemical behavior of an element depends on the outermost shell that contains electrons. The electronic configuration for helium is $1s^2$, and the $n = 1$ shell (which is the outermost shell because it is the only shell) is filled. Also, the energy of the atom in this configuration is considerably lower than the energy for the configuration in which an electron is in the next available level, the $2s$ subshell. Next, look at the electronic configuration for neon, $1s^2 2s^2 2p^6$. Again, the outermost shell ($n = 2$ in this case) is filled and a wide gap in energy occurs between the filled $2p$ subshell and the next available one, the $3s$ subshell. Argon has the configuration $1s^2 2s^2 2p^6 3s^2 3p^6$. Here, it is only the $3p$ subshell that is filled, but again a wide gap in energy occurs between the filled $3p$ subshell and the next available one, the $3d$ subshell. This pattern continues through all the noble gases. Krypton has a filled $4p$ subshell, xenon a filled $5p$ subshell, and radon a filled $6p$ subshell.

The column to the left of the noble gases in the periodic table consists of a group of elements called the *halogens*: fluorine, chlorine, bromine, iodine, and astatine. At room temperature, fluorine and chlorine are gases, bromine is a liquid, and iodine and astatine are solids. In each of these atoms, the outer subshell is one electron short of being filled. As a result, the halogens are chemically very active, readily accepting an electron from another atom to form a closed shell. The halogens tend to form strong ionic bonds with atoms at the other side of the periodic table. (We shall discuss ionic bonds in Chapter 43.) In a halogen lightbulb, bromine or iodine atoms combine with tungsten atoms evaporated from the filament and return them to the filament, resulting in a longer-lasting lightbulb. In addition, the filament can be operated at a higher temperature than in ordinary lightbulbs, giving a brighter and whiter light.

At the left side of the periodic table, the Group I elements consist of hydrogen and the *alkali metals*: lithium, sodium, potassium, rubidium, cesium, and francium. Each of these atoms contains one electron in a subshell outside of a closed subshell. Therefore, these elements easily form positive ions because the lone electron is bound with a relatively low energy and is easily removed. Therefore, the alkali metal atoms are chemically active and form very strong bonds with halogen atoms. For example, table salt, NaCl, is a combination of an alkali metal and a halogen. Because the outer electron is weakly bound, pure alkali metals tend to be good electrical conductors. Because of their high chemical activity, however, they are not generally found in nature in pure form.

It is interesting to plot ionization energy versus atomic number Z as in Figure 42.20. Notice the pattern of $\Delta Z = 2, 8, 8, 18, 18, 32$ for the various peaks. This pattern follows from the exclusion principle and helps explain why the elements repeat their chemical properties in groups. For example, the peaks at $Z = 2, 10, 18,$

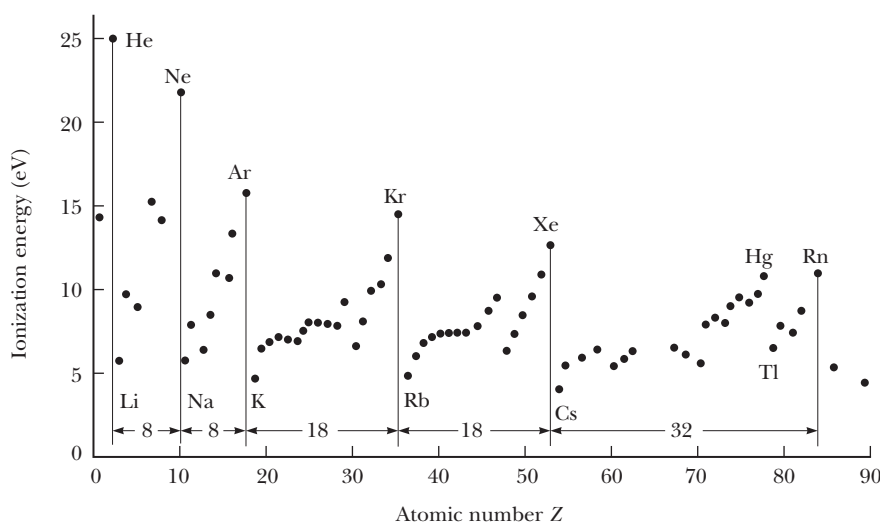


Figure 42.20 Ionization energy of the elements versus atomic number.

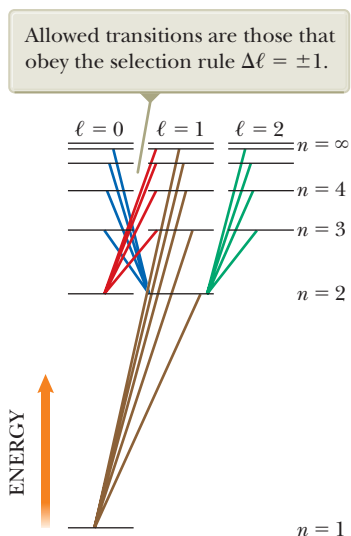


Figure 42.21 Some allowed electronic transitions for hydrogen, represented by the colored lines.

Selection rules for allowed atomic transitions

$$\Delta\ell = \pm 1 \quad \text{and} \quad \Delta m_\ell = 0, \pm 1 \quad (42.34)$$

and 36 correspond to the noble gases helium, neon, argon, and krypton, respectively, which, as we have mentioned, all have filled outermost shells. These elements have relatively high ionization energies and similar chemical behavior.

42.8 More on Atomic Spectra: Visible and X-Ray

In Section 42.1, we discussed the observation and early interpretation of visible spectral lines from gases. These spectral lines have their origin in transitions between quantized atomic states. We shall investigate these transitions more deeply in these final three sections of this chapter.

A modified energy-level diagram for hydrogen is shown in Figure 42.21. In this diagram, the allowed values of ℓ for each shell are separated horizontally. Figure 42.21 shows only those states up to $\ell = 2$; the shells from $n = 4$ upward would have more sets of states to the right, which are not shown. Transitions for which ℓ does not change are very unlikely to occur and are called *forbidden transitions*. (Such transitions actually can occur, but their probability is very low relative to the probability of “allowed” transitions.) The various diagonal lines represent allowed transitions between stationary states. Whenever an atom makes a transition from a higher energy state to a lower one, a photon of light is emitted. The frequency of this photon is $f = \Delta E/h$, where ΔE is the energy difference between the two states and h is Planck’s constant. The **selection rules** for the *allowed transitions* are

Figure 42.21 shows that the orbital angular momentum of an atom *changes* when it makes a transition to a lower energy state. Therefore, the atom alone is a *non-isolated* system for angular momentum. If we consider the atom–photon system, however, it must be an *isolated* system for angular momentum because nothing else is interacting with this system. The photon involved in the process must carry angular momentum away from the atom when the transition occurs. In fact, the photon has an angular momentum equivalent to that of a particle having a spin of 1. We have now determined over several chapters that a photon has energy, linear momentum, and angular momentum, and each of these is conserved in atomic processes.

Recall from Equation 42.19 that the allowed energies for one-electron atoms and ions, such as hydrogen and He^+ , are

$$E_n = -\frac{k_e e^2}{2a_0} \left(\frac{Z^2}{n^2} \right) = -\frac{(13.6 \text{ eV})Z^2}{n^2} \quad (42.35)$$

This equation was developed from the Bohr theory, but it serves as a good first approximation in quantum theory as well. For multielectron atoms, the positive nuclear charge Ze is largely shielded by the negative charge of the inner-shell electrons. Therefore, the outer electrons interact with a net charge that is smaller than the nuclear charge. The expression for the allowed energies for multielectron atoms has the same form as Equation 42.35 with Z replaced by an effective atomic number Z_{eff} :

$$E_n = -\frac{(13.6 \text{ eV})Z_{\text{eff}}^2}{n^2} \quad (42.36)$$

where Z_{eff} depends on n and ℓ .

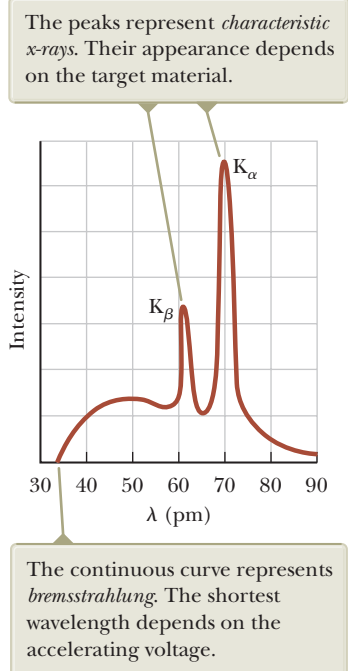


Figure 42.22 The x-ray spectrum of a metal target. The data shown were obtained when 37-keV electrons bombarded a molybdenum target.

X-Ray Spectra

X-rays are emitted when high-energy electrons or any other charged particles bombard a metal target. The x-ray spectrum typically consists of a broad continuous band containing a series of sharp lines as shown in Figure 42.22. In Section 34.6,

we mentioned that an accelerated electric charge emits electromagnetic radiation. The x-rays in Figure 42.22 are the result of the slowing down of high-energy electrons as they strike the target. It may take several interactions with the atoms of the target before the electron gives up all its kinetic energy. The amount of kinetic energy given up in any interaction can vary from zero up to the entire kinetic energy of the electron. Therefore, the wavelength of radiation from these interactions lies in a continuous range from some minimum value up to infinity. It is this general slowing down of the electrons that provides the continuous curve in Figure 42.22, which shows the cutoff of x-rays below a minimum wavelength value that depends on the kinetic energy of the incoming electrons. X-ray radiation with its origin in the slowing down of electrons is called **bremstrahlung**, the German word for “braking radiation.”

Extremely high-energy bremsstrahlung can be used for the treatment of cancerous tissues. Figure 42.23 shows a machine that uses a linear accelerator to accelerate electrons up to 18 MeV and smash them into a tungsten target. The result is a beam of photons, up to a maximum energy of 18 MeV, which is actually in the gamma-ray range in Figure 34.13. This radiation is directed at the tumor in the patient.

The discrete lines in Figure 42.22, called **characteristic x-rays** and discovered in 1908, have a different origin. Their origin remained unexplained until the details of atomic structure were understood. The first step in the production of characteristic x-rays occurs when a bombarding electron collides with a target atom. The electron must have sufficient energy to remove an inner-shell electron from the atom. The vacancy created in the shell is filled when an electron in a higher level drops down into the level containing the vacancy. The existence of characteristic lines in an x-ray spectrum is further direct evidence of the quantization of energy in atomic systems.

The time interval for atomic transitions to happen is very short, less than 10^{-9} s. This transition is accompanied by the emission of a photon whose energy equals the difference in energy between the two levels. Typically, the energy of such transitions is greater than 1 000 eV and the emitted x-ray photons have wavelengths in the range of 0.01 nm to 1 nm.

Let’s assume the incoming electron has dislodged an atomic electron from the innermost shell, the K shell. If the vacancy is filled by an electron dropping from the next higher shell—the L shell—the photon emitted has an energy corresponding to the K_α characteristic x-ray line on the curve of Figure 42.22. In this notation, K refers to the final level of the electron and the subscript α , as the *first* letter of the Greek alphabet, refers to the initial level as the *first* one above the final level. Figure 42.24 shows this transition as well as others discussed below. If the vacancy in the K shell is filled by an electron dropping from the M shell, the K_β line in Figure 42.22 is produced.

Other characteristic x-ray lines are formed when electrons drop from upper levels to vacancies other than those in the K shell. For example, L lines are produced when vacancies in the L shell are filled by electrons dropping from higher shells. An L_α line is produced as an electron drops from the M shell to the L shell, and an L_β line is produced by a transition from the N shell to the L shell.

Although multielectron atoms cannot be analyzed exactly with either the Bohr model or the Schrödinger equation, we can apply Gauss’s law from Chapter 24 to make some surprisingly accurate estimates of expected x-ray energies and wavelengths. Consider an atom of atomic number Z in which one of the two electrons in the K shell has been ejected. Imagine drawing a gaussian sphere immediately inside the most probable radius of the L electrons. The electric field at the position of the L electrons is a combination of the fields created by the nucleus, the single K electron, the other L electrons, and the outer electrons. The wave functions of the outer electrons are such that the electrons have a very high probability of being farther from the nucleus than the L electrons are. Therefore, the outer



Copyright © 2009, Varian Medical Systems, Inc. All rights reserved.

Figure 42.23 Bremsstrahlung is created by this machine and used to treat cancer in a patient.

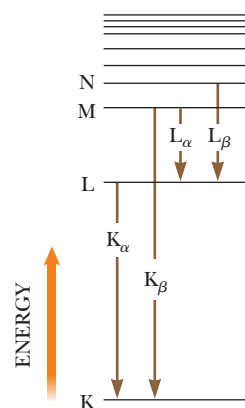


Figure 42.24 Transitions between higher and lower atomic energy levels that give rise to x-ray photons from heavy atoms when they are bombarded with high-energy electrons.

electrons are much more likely to be outside the gaussian surface than inside and, on average, do not contribute significantly to the electric field at the position of the L electrons. The effective charge inside the gaussian surface is the positive nuclear charge and one negative charge due to the single K electron. Ignoring the interactions between L electrons, a single L electron behaves as if it experiences an electric field due to a charge $(Z - 1)e$ enclosed by the gaussian surface. The nuclear charge is shielded by the electron in the K shell such that Z_{eff} in Equation 42.36 is $Z - 1$. For higher-level shells, the nuclear charge is shielded by electrons in all the inner shells.

We can now use Equation 42.36 to estimate the energy associated with an electron in the L shell:

$$E_L = -(Z - 1)^2 \frac{13.6 \text{ eV}}{2^2}$$

After the atom makes the transition, there are two electrons in the K shell. We can approximate the energy associated with one of these electrons as that of a one-electron atom. (In reality, the nuclear charge is reduced somewhat by the negative charge of the other electron, but let's ignore this effect.) Therefore,

$$E_K \approx -Z^2(13.6 \text{ eV}) \quad (42.37)$$

As Example 42.5 shows, the energy of the atom with an electron in an M shell can be estimated in a similar fashion. Taking the energy difference between the initial and final levels, we can then calculate the energy and wavelength of the emitted photon.

In 1914, Henry G. J. Moseley (1887–1915) plotted $\sqrt{1/\lambda}$ versus the Z values for a number of elements where λ is the wavelength of the K_α line of each element. He found that the plot is a straight line as in Figure 42.25, which is consistent with rough calculations of the energy levels given by Equation 42.37. From this plot, Moseley determined the Z values of elements that had not yet been discovered and produced a periodic table in excellent agreement with the known chemical properties of the elements. Until that experiment, atomic numbers had been merely placeholders for the elements that appeared in the periodic table, the elements being ordered according to mass.

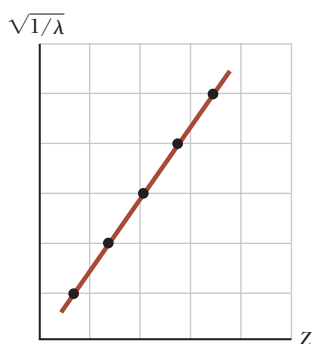


Figure 42.25 A Moseley plot of $\sqrt{1/\lambda}$ versus Z , where λ is the wavelength of the K_α x-ray line of the element of atomic number Z .

Quick Quiz 42.5 In an x-ray tube, as you increase the energy of the electrons striking the metal target, do the wavelengths of the characteristic x-rays (a) increase, (b) decrease, or (c) remain constant?

Quick Quiz 42.6 True or False: It is possible for an x-ray spectrum to show the continuous spectrum of x-rays without the presence of the characteristic x-rays.

Example 42.5 Estimating the Energy of an X-Ray

Estimate the energy of the characteristic x-ray emitted from a tungsten target when an electron drops from an M shell ($n = 3$ state) to a vacancy in the K shell ($n = 1$ state). The atomic number for tungsten is $Z = 74$.

SOLUTION

Conceptualize Imagine an accelerated electron striking a tungsten atom and ejecting an electron from the K shell ($n = 1$). Subsequently, an electron in the M shell ($n = 3$) drops down to fill the vacancy and the energy difference between the states is emitted as an x-ray photon.

Categorize We estimate the results using equations developed in this section, so we categorize this example as a substitution problem.

Use Equation 42.37 and $Z = 74$ for tungsten to estimate the energy associated with the electron in the K shell:

$$E_K \approx -(74)^2(13.6 \text{ eV}) = -7.4 \times 10^4 \text{ eV}$$

42.5 continued

Use Equation 42.36 and that nine electrons shield the nuclear charge (eight electrons in the $n = 2$ state and one electron in the $n = 1$ state) to estimate the energy of the M shell:

Find the energy of the emitted x-ray photon:

$$E_M \approx -\frac{(13.6 \text{ eV})(74 - 9)^2}{(3)^2} \approx -6.4 \times 10^3 \text{ eV}$$

$$\begin{aligned} hf = E_M - E_K &\approx -6.4 \times 10^3 \text{ eV} - (-7.4 \times 10^4 \text{ eV}) \\ &\approx 6.8 \times 10^4 \text{ eV} = \mathbf{68 \text{ keV}} \end{aligned}$$

Consultation of x-ray tables shows that the M–K transition energies in tungsten vary from 66.9 keV to 67.7 keV, where the range of energies is due to slightly different energy values for states of different ℓ . Therefore, our estimate differs from the midpoint of this experimentally measured range by approximately 1%.

42.9 Spontaneous and Stimulated Transitions

We have seen that an atom absorbs and emits electromagnetic radiation only at frequencies that correspond to the energy differences between allowed states. Let's now examine more details of these processes. Consider an atom having the allowed energy levels labeled E_1, E_2, E_3, \dots . When radiation is incident on the atom, only those photons whose energy hf matches the energy separation ΔE between two energy levels can be absorbed by the atom as represented in Figure 42.26. This process is called **stimulated absorption** because the photon stimulates the atom to make the upward transition. At ordinary temperatures, most of the atoms in a sample are in the ground state. If a vessel containing many atoms of a gaseous element is illuminated with radiation of all possible photon frequencies (that is, a continuous spectrum), only those photons having energy $E_2 - E_1, E_3 - E_1, E_4 - E_1$, and so on are absorbed by the atoms. As a result of this absorption, some of the atoms are raised to excited states.

Once an atom is in an excited state, the excited atom can make a transition back to a lower energy level, emitting a photon in the process as in Figure 42.27. This process is known as **spontaneous emission** because it happens naturally, without requiring an event to trigger the transition. Typically, an atom remains in an excited state for only about 10^{-8} s.

In addition to spontaneous emission, **stimulated emission** occurs. Suppose an atom is in an excited state E_2 as in Figure 42.28 (page 1326). If the excited state is a *metastable state*—that is, if its lifetime is much longer than the typical 10^{-8} s lifetime of

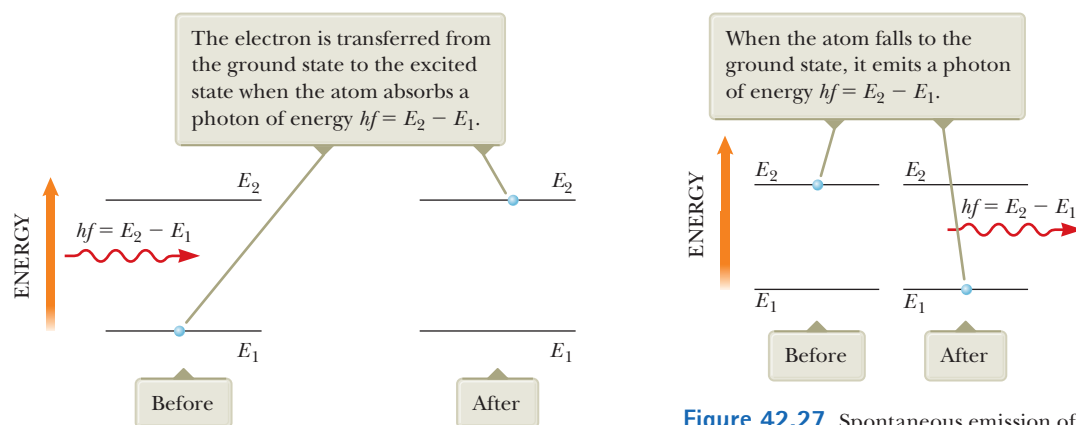
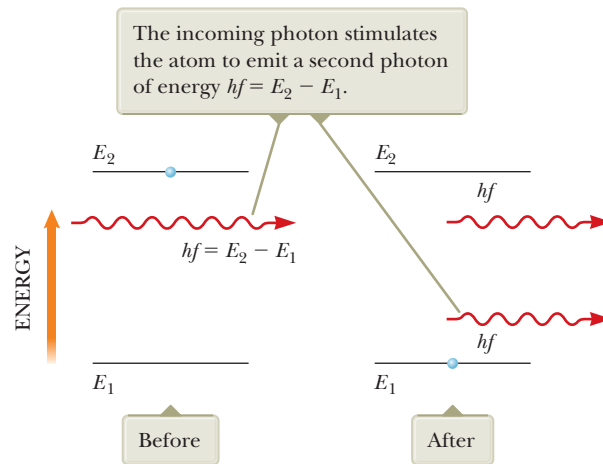


Figure 42.26 Stimulated absorption of a photon.

Figure 42.27 Spontaneous emission of a photon by an atom that is initially in the excited state E_2 .

Figure 42.28 Stimulated emission of a photon by an incoming photon of energy $hf = E_2 - E_1$. Initially, the atom is in the excited state.



excited states—the time interval until spontaneous emission occurs is relatively long. Let's imagine that during that interval a photon of energy $hf = E_2 - E_1$ is incident on the atom. One possibility is that the photon energy is sufficient for the photon to ionize the atom. Another possibility is that the interaction between the incoming photon and the atom causes the atom to return to the ground state¹¹ and thereby emit a second photon with energy $hf = E_2 - E_1$. In this process, the incident photon is not absorbed; therefore, after the stimulated emission, two photons with identical energy exist: the incident photon and the emitted photon. The two are in phase and travel in the same direction, which is an important consideration in lasers, discussed next.

42.10 Lasers

In this section, we explore the nature of laser light and a variety of applications of lasers in our technological society. The primary properties of laser light that make it useful in these technological applications are the following:

- Laser light is coherent. The individual rays of light in a laser beam maintain a fixed phase relationship with one another.
- Laser light is monochromatic. Light in a laser beam has a very narrow range of wavelengths.
- Laser light has a small angle of divergence. The beam spreads out very little, even over large distances.

To understand the origin of these properties, let's combine our knowledge of atomic energy levels from this chapter with some special requirements for the atoms that emit laser light.

We have described how an incident photon can cause atomic energy transitions either upward (stimulated absorption) or downward (stimulated emission). The two processes are equally probable. When light is incident on a collection of atoms, a net absorption of energy usually occurs because when the system is in thermal equilibrium, many more atoms are in the ground state than in excited states. If the situation can be inverted so that more atoms are in an excited state than in the ground state, however, a net emission of photons can result. Such a condition is called **population inversion**.

Population inversion is, in fact, the fundamental principle involved in the operation of a **laser** (an acronym for *light amplification by stimulated emission of radi-*

¹¹This phenomenon is fundamentally due to *resonance*. The incoming photon has a frequency and drives the system of the atom at that frequency. Because the driving frequency matches that associated with a transition between states—one of the natural frequencies of the atom—there is a large response: the atom makes the transition.

tion). The full name indicates one of the requirements for laser light: to achieve laser action, the process of stimulated emission must occur.

Suppose an atom is in the excited state E_2 as in Figure 42.28 and a photon with energy $hf = E_2 - E_1$ is incident on it. As described in Section 42.9, the incoming photon can stimulate the excited atom to return to the ground state and thereby emit a second photon having the same energy hf and traveling in the same direction. The incident photon is not absorbed, so after the stimulated emission, there are two identical photons: the incident photon and the emitted photon. The emitted photon is in phase with the incident photon. These photons can stimulate other atoms to emit photons in a chain of similar processes. The many photons produced in this fashion are the source of the intense, coherent light in a laser.

For the stimulated emission to result in laser light, there must be a buildup of photons in the system. The following three conditions must be satisfied to achieve this buildup:

- The system must be in a state of population inversion: there must be more atoms in an excited state than in the ground state. That must be true because the number of photons emitted must be greater than the number absorbed.
- The excited state of the system must be a *metastable state*, meaning that its lifetime must be long compared with the usually short lifetimes of excited states, which are typically 10^{-8} s. In this case, the population inversion can be established and stimulated emission is likely to occur before spontaneous emission.
- The emitted photons must be confined in the system long enough to enable them to stimulate further emission from other excited atoms. That is achieved by using reflecting mirrors at the ends of the system. One end is made totally reflecting, and the other is partially reflecting. A fraction of the light intensity passes through the partially reflecting end, forming the beam of laser light (Fig. 42.29).

One device that exhibits stimulated emission of radiation is the helium–neon gas laser. Figure 42.30 is an energy-level diagram for the neon atom in this system. The mixture of helium and neon is confined to a glass tube that is sealed at the ends by mirrors. A voltage applied across the tube causes electrons to sweep through the tube, colliding with the atoms of the gases and raising them into excited states. Neon atoms are excited to state E_3^* through this process (the asterisk indicates a metastable state) and also as a result of collisions with excited helium atoms. Stimulated emission occurs, causing neon atoms to make transitions to state E_2 . Neighboring excited atoms are also stimulated. The result is the production of coherent light at a wavelength of 632.8 nm.

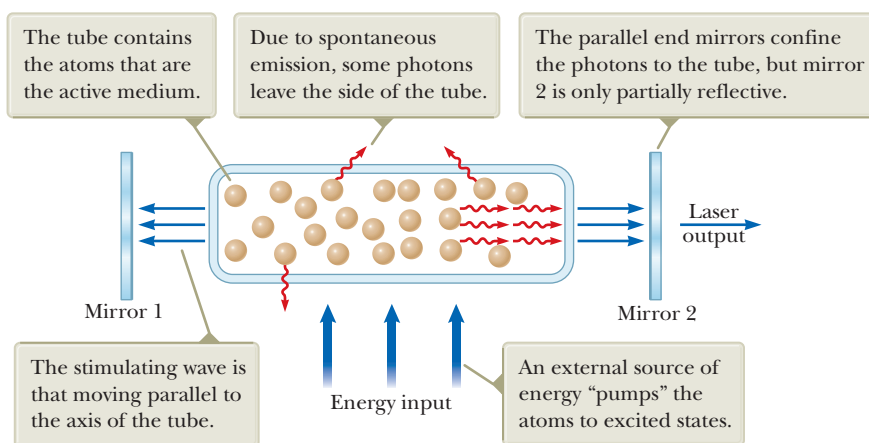


Figure 42.29 Schematic diagram of a laser design.

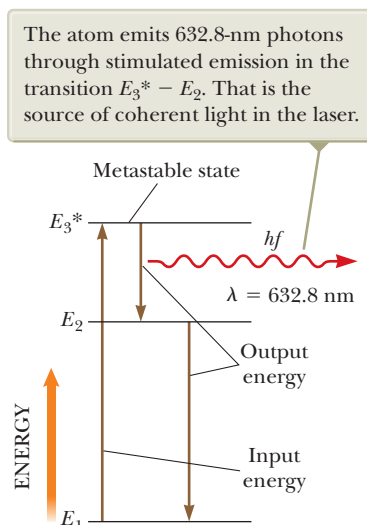


Figure 42.30 Energy-level diagram for a neon atom in a helium–neon laser.

Figure 42.31 This robot carrying laser scissors, which can cut up to 50 layers of fabric at a time, is one of the many applications of laser technology.



© 36clicks | Dreamstime.com

Applications

Since the development of the first laser in 1960, tremendous growth has occurred in laser technology. Lasers that cover wavelengths in the infrared, visible, and ultraviolet regions are now available. *Laser diodes* are used as laser pointers, and in surveying and construction rangefinders, fiber optic communication, DVD and Blu-ray players, and bar code readers. *Carbon dioxide lasers* are used in industry for welding and cutting, such as the process shown to cut fabric in Figure 42.31. *Excimer lasers* are used in Lasik eye surgery. A variety of other types of lasers exist and are used in various applications. These applications are possible because of the unique characteristics of laser light. In addition to being highly monochromatic, laser light is also highly directional and can be sharply focused to produce regions of extremely intense light energy (with energy densities 10^{12} times the density in the flame of a typical cutting torch).

Lasers are used in precision long-range distance measurement (range finding). In recent years, it has become important in astronomy and geophysics to measure as precisely as possible the distances from various points on the surface of the Earth to a point on the Moon's surface. To facilitate these measurements, the *Apollo* astronauts set up a 0.5-m square of reflector prisms on the Moon, which enables laser pulses directed from an Earth-based station to be retroreflected to the same station (see Fig. 35.8a). Using the known speed of light and the measured round-trip travel time of a laser pulse, the Earth–Moon distance can be determined to a precision of better than 10 cm.

Because various laser wavelengths can be absorbed in specific biological tissues, lasers have a number of medical applications. For example, certain laser procedures have greatly reduced blindness in patients with glaucoma and diabetes. Glaucoma is a widespread eye condition characterized by a high fluid pressure in the eye, a condition that can lead to destruction of the optic nerve. A simple laser operation (iridectomy) can “burn” open a tiny hole in a clogged membrane, relieving the destructive pressure. A serious side effect of diabetes is neovascularization, the proliferation of weak blood vessels, which often leak blood. When neovascularization occurs in the retina, vision deteriorates (diabetic retinopathy) and finally is destroyed. Today, it is possible to direct the green light from an argon ion laser through the clear eye lens and eye fluid, focus on the retina edges, and photocoagulate the leaky vessels. Even people who have only minor vision defects such as nearsightedness are benefiting from the use of lasers to reshape the cornea, changing its focal length and reducing the need for eyeglasses.

Laser surgery is now an everyday occurrence at hospitals and medical clinics around the world. Infrared light at $10\ \mu\text{m}$ from a carbon dioxide laser can cut through muscle tissue, primarily by vaporizing the water contained in cellular material. Laser power of approximately 100 W is required in this technique. The advantage of the “laser knife” over conventional methods is that laser radiation cuts tissue and coagulates blood at the same time, leading to a substantial reduction in blood loss. In addition, the technique virtually eliminates cell migration, an important consideration when tumors are being removed.

A laser beam can be trapped in fine optical fiber light guides (endoscopes) by means of total internal reflection. An endoscope can be introduced through natural orifices, conducted around internal organs, and directed to specific interior body locations, eliminating the need for invasive surgery. For example, bleeding in the gastrointestinal tract can be optically cauterized by endoscopes inserted through the patient's mouth.

In biological and medical research, it is often important to isolate and collect unusual cells for study and growth. A laser cell separator exploits the tagging of specific cells with fluorescent dyes. All cells are then dropped from a tiny charged nozzle and laser-scanned for the dye tag. If triggered by the correct light-emitting tag, a small voltage applied to parallel plates deflects the falling electrically charged cell into a collection beaker.

An exciting area of research and technological applications arose in the 1990s with the development of *laser trapping* of atoms. One scheme, called *optical molasses* and developed by Steven Chu of Stanford University and his colleagues, involves focusing six laser beams onto a small region in which atoms are to be trapped. Each pair of lasers is along one of the x , y , and z axes and emits light in opposite directions (Fig. 42.32). The frequency of the laser light is tuned to be slightly below the absorption frequency of the subject atom. Imagine that an atom has been placed into the trap region and moves along the positive x axis toward the laser that is emitting light toward it (the rightmost laser on the x axis in Fig. 42.32). Because the atom is moving, the light from the laser appears Doppler-shifted upward in frequency in the reference frame of the atom. Therefore, a match between the Doppler-shifted laser frequency and the absorption frequency of the atom exists and the atom absorbs photons.¹² The momentum carried by these photons results in the atom being pushed back to the center of the trap. By incorporating six lasers, the atoms are pushed back into the trap regardless of which way they move along any axis.

In 1986, Chu developed *optical tweezers*, a device that uses a single tightly focused laser beam to trap and manipulate small particles. In combination with microscopes, optical tweezers have opened up many new possibilities for biologists. Optical tweezers have been used to manipulate live bacteria without damage, move chromosomes within a cell nucleus, and measure the elastic properties of a single DNA molecule. Chu shared the 1997 Nobel Prize in Physics with two of his colleagues for the development of the techniques of optical trapping.

An extension of laser trapping, *laser cooling*, is possible because the normal high speeds of the atoms are reduced when they are restricted to the region of the trap. As a result, the temperature of the collection of atoms can be reduced to a few microkelvins. The technique of laser cooling allows scientists to study the behavior of atoms at extremely low temperatures (Fig. 42.33).

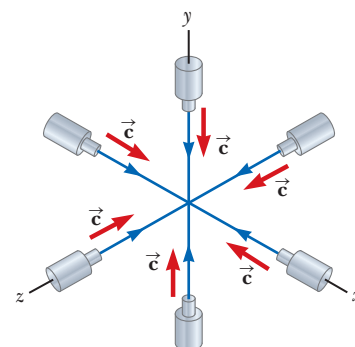


Figure 42.32 An optical trap for atoms is formed at the intersection point of six counterpropagating laser beams along mutually perpendicular axes.

The orange dot is the sample of trapped sodium atoms.




Figure 42.33 A staff member of the National Institute of Standards and Technology views a sample of trapped sodium atoms cooled to a temperature of less than 1 mK.

Summary

Concepts and Principles

- The wavelengths of spectral lines from hydrogen, called the **Balmer series**, can be described by the equation

$$\frac{1}{\lambda} = R_{\text{H}} \left(\frac{1}{2^2} - \frac{1}{n^2} \right) \quad n = 3, 4, 5, \dots \quad (42.1)$$

where R_{H} is the **Rydberg constant**. The spectral lines corresponding to values of n from 3 to 6 are in the visible range of the electromagnetic spectrum. Values of n higher than 6 correspond to spectral lines in the ultraviolet region of the spectrum.

continued

¹²The laser light traveling in the same direction as the atom is Doppler-shifted further downward in frequency, so there is no absorption. Therefore, the atom is not pushed out of the trap by the diametrically opposed laser.

The Bohr model of the atom is successful in describing some details of the spectra of atomic hydrogen and hydrogen-like ions. One basic assumption of the model is that the electron can exist only in discrete orbits such that the angular momentum of the electron is an integral multiple of $h/2\pi = \hbar$. When we assume circular orbits and a simple Coulomb attraction between electron and proton, the energies of the quantum states for hydrogen are calculated to be

$$E_n = -\frac{k_e e^2}{2a_0} \left(\frac{1}{n^2} \right) \quad n = 1, 2, 3, \dots \quad (42.13)$$

where n is an integer called the **quantum number**, k_e is the Coulomb constant, e is the electronic charge, and $a_0 = 0.0529 \text{ nm}$ is the **Bohr radius**.

If the electron in a hydrogen atom makes a transition from an orbit whose quantum number is n_i to one whose quantum number is n_f , where $n_f < n_i$, a photon is emitted by the atom. The frequency of this photon is

$$f = \frac{k_e e^2}{2a_0 h} \left(\frac{1}{n_f^2} - \frac{1}{n_i^2} \right) \quad (42.15)$$

An atom in a state characterized by a specific value of n can have the following values of L , the magnitude of the atom's orbital angular momentum \vec{L} :

$$L = \sqrt{\ell(\ell + 1)} \hbar$$

$$\ell = 0, 1, 2, \dots, n - 1 \quad (42.27)$$

The allowed values of the projection of \vec{L} along the z axis are

$$L_z = m_\ell \hbar \quad (42.28)$$

Only discrete values of L_z are allowed as determined by the restrictions on m_ℓ . This quantization of L_z is referred to as **space quantization**.

The **exclusion principle** states that **no two electrons in an atom can be in the same quantum state**. In other words, no two electrons can have the same set of quantum numbers n , ℓ , m_ℓ , and m_s . Using this principle, the electronic configurations of the elements can be determined. This principle serves as a basis for understanding atomic structure and the chemical properties of the elements.

Quantum mechanics can be applied to the hydrogen atom by the use of the potential energy function $U(r) = -k_e e^2/r$ in the Schrödinger equation. The solution to this equation yields wave functions for allowed states and allowed energies:

$$E_n = -\left(\frac{k_e e^2}{2a_0} \right) \frac{1}{n^2} = -\frac{13.606 \text{ eV}}{n^2} \quad n = 1, 2, 3, \dots \quad (42.21)$$

where n is the **principal quantum number**. The allowed wave functions depend on three quantum numbers: n , ℓ , and m_ℓ , where ℓ is the **orbital quantum number** and m_ℓ is the **orbital magnetic quantum number**. The restrictions on the quantum numbers are

$$n = 1, 2, 3, \dots$$

$$\ell = 0, 1, 2, \dots, n - 1$$

$$m_\ell = -\ell, -\ell + 1, \dots, \ell - 1, \ell$$

All states having the same principal quantum number n form a **shell**, identified by the letters K, L, M, ... (corresponding to $n = 1, 2, 3, \dots$). All states having the same values of n and ℓ form a **subshell**, designated by the letters s, p, d, f, \dots (corresponding to $\ell = 0, 1, 2, 3, \dots$).

The electron has an intrinsic angular momentum called the **spin angular momentum**. Electron spin can be described by a single quantum number $s = \frac{1}{2}$. To describe a quantum state completely, it is necessary to include a fourth quantum number m_s , called the **spin magnetic quantum number**. This quantum number can have only two values, $\pm \frac{1}{2}$. The magnitude of the spin angular momentum is

$$S = \frac{\sqrt{3}}{2} \hbar \quad (42.30)$$

and the z component of \vec{S} is

$$S_z = m_s \hbar = \pm \frac{1}{2} \hbar \quad (42.31)$$

That is, the spin angular momentum is also quantized in space, as specified by the spin magnetic quantum number $m_s = \pm \frac{1}{2}$.

The magnetic moment $\vec{\mu}_{\text{spin}}$ associated with the spin angular momentum of an electron is

$$\vec{\mu}_{\text{spin}} = -\frac{e}{m_e} \vec{S} \quad (42.32)$$

The z component of $\vec{\mu}_{\text{spin}}$ can have the values

$$\mu_{\text{spin},z} = \pm \frac{e\hbar}{2m_e} \quad (42.33)$$

The x-ray spectrum of a metal target consists of a set of sharp characteristic lines superimposed on a broad continuous spectrum. **Bremsstrahlung** is x-radiation with its origin in the slowing down of high-energy electrons as they encounter the target. **Characteristic x-rays** are emitted by atoms when an electron undergoes a transition from an outer shell to a vacancy in an inner shell.

Atomic transitions can be described with three processes: **stimulated absorption**, in which an incoming photon raises the atom to a higher energy state; **spontaneous emission**, in which the atom makes a transition to a lower energy state, emitting a photon; and **stimulated emission**, in which an incident photon causes an excited atom to make a downward transition, emitting a photon identical to the incident one.

Objective Questions

1. denotes answer available in *Student Solutions Manual/Study Guide*

- (i) What is the principal quantum number of the initial state of an atom as it emits an M_β line in an x-ray spectrum? (a) 1 (b) 2 (c) 3 (d) 4 (e) 5 (ii) What is the principal quantum number of the final state for this transition? Choose from the same possibilities as in part (i).
- If an electron in an atom has the quantum numbers $n = 3$, $\ell = 2$, $m_\ell = 1$, and $m_s = \frac{1}{2}$, what state is it in? (a) $3s$ (b) $3p$ (c) $3d$ (d) $4d$ (e) $3f$
- An electron in the $n = 5$ energy level of hydrogen undergoes a transition to the $n = 3$ energy level. What is the wavelength of the photon the atom emits in this process? (a) 2.28×10^{-6} m (b) 8.20×10^{-7} m (c) 3.64×10^{-7} m (d) 1.28×10^{-6} m (e) 5.92×10^{-5} m
- Consider the $n = 3$ energy level in a hydrogen atom. How many electrons can be placed in this level? (a) 1 (b) 2 (c) 8 (d) 9 (e) 18
- Which of the following is *not* one of the basic assumptions of the Bohr model of hydrogen? (a) Only certain electron orbits are stable and allowed. (b) The electron moves in circular orbits about the proton under the influence of the Coulomb force. (c) The charge on the electron is quantized. (d) Radiation is emitted by the atom when the electron moves from a higher energy state to a lower energy state. (e) The angular momentum associated with the electron's orbital motion is quantized.
- Let $-E$ represent the energy of a hydrogen atom. (i) What is the kinetic energy of the electron? (a) $2E$ (b) E (c) 0 (d) $-E$ (e) $-2E$ (ii) What is the potential energy of the atom? Choose from the same possibilities (a) through (e).
- The periodic table is based on which of the following principles? (a) The uncertainty principle. (b) All electrons in an atom must have the same set of quantum numbers. (c) Energy is conserved in all interactions. (d) All electrons in an atom are in orbitals having the same energy. (e) No two electrons in an atom can have the same set of quantum numbers.
- (a) Can a hydrogen atom in the ground state absorb a photon of energy less than 13.6 eV? (b) Can this atom absorb a photon of energy greater than 13.6 eV?
- Which of the following electronic configurations are *not* allowed for an atom? Choose all correct answers. (a) $2s^2 2p^6$ (b) $3s^2 3p^7$ (c) $3d^7 4s^2$ (d) $3d^{10} 4s^2 4p^6$ (e) $1s^2 2s^2 2d^1$
- What can be concluded about a hydrogen atom with its electron in the d state? (a) The atom is ionized. (b) The orbital quantum number is $\ell = 1$. (c) The principal quantum number is $n = 2$. (d) The atom is in its ground state. (e) The orbital angular momentum of the atom is not zero.
- (i) Rank the following transitions for a hydrogen atom from the transition with the greatest gain in energy to that with the greatest loss, showing any cases of equality. (a) $n_i = 2$; $n_f = 5$ (b) $n_i = 5$; $n_f = 3$ (c) $n_i = 7$; $n_f = 4$ (d) $n_i = 4$; $n_f = 7$ (ii) Rank the same transitions as in part (i) according to the wavelength of the photon absorbed or emitted by an otherwise isolated atom from greatest wavelength to smallest.
- When an atom emits a photon, what happens? (a) One of its electrons leaves the atom. (b) The atom moves to a state of higher energy. (c) The atom moves to a state of lower energy. (d) One of its electrons collides with another particle. (e) None of those events occur.
- (a) In the hydrogen atom, can the quantum number n increase without limit? (b) Can the frequency of possible discrete lines in the spectrum of hydrogen increase without limit? (c) Can the wavelength of possible discrete lines in the spectrum of hydrogen increase without limit?
- Consider the quantum numbers (a) n , (b) ℓ , (c) m_ℓ , and (d) m_s . (i) Which of these quantum numbers are fractional as opposed to being integers? (ii) Which can sometimes attain negative values? (iii) Which can be zero?
- When an electron collides with an atom, it can transfer all or some of its energy to the atom. A hydrogen atom is in its ground state. Incident on the atom are several electrons, each having a kinetic energy of 10.5 eV. What is the result? (a) The atom can be excited to a higher allowed state. (b) The atom is ionized. (c) The electrons pass by the atom without interaction.

Conceptual Questions

1. denotes answer available in *Student Solutions Manual/Study Guide*

- Why is stimulated emission so important in the operation of a laser?
- An energy of about 21 eV is required to excite an electron in a helium atom from the 1s state to the 2s state. The same transition for the He⁺ ion requires approximately twice as much energy. Explain.
- Why are three quantum numbers needed to describe the state of a one-electron atom (ignoring spin)?
- Compare the Bohr theory and the Schrödinger treatment of the hydrogen atom, specifically commenting on their treatment of total energy and orbital angular momentum of the atom.
- Could the Stern–Gerlach experiment be performed with ions rather than neutral atoms? Explain.
- Why is a *nonuniform* magnetic field used in the Stern–Gerlach experiment?
- Discuss some consequences of the exclusion principle.
- (a) According to Bohr's model of the hydrogen atom, what is the uncertainty in the radial coordinate of the electron? (b) What is the uncertainty in the radial component of the velocity of the electron? (c) In what way does the model violate the uncertainty principle?
- Why do lithium, potassium, and sodium exhibit similar chemical properties?
- It is easy to understand how two electrons (one spin up, one spin down) fill the $n = 1$ or K shell for a helium atom. How is it possible that eight more electrons are allowed in the $n = 2$ shell, filling the K and L shells for a neon atom?
- Suppose the electron in the hydrogen atom obeyed classical mechanics rather than quantum mechanics. Why should a gas of such hypothetical atoms emit a continuous spectrum rather than the observed line spectrum?
- Does the intensity of light from a laser fall off as $1/r^2$? Explain.

Problems



The problems found in this chapter may be assigned online in Enhanced WebAssign

1. straightforward; 2. intermediate;
3. challenging

1. full solution available in the *Student Solutions Manual/Study Guide*



Analysis Model tutorial available in Enhanced WebAssign



Guided Problem



Master It tutorial available in Enhanced WebAssign



Watch It video solution available in Enhanced WebAssign

Section 42.1 Atomic Spectra of Gases

- The wavelengths of the Lyman series for hydrogen are given by

$$\frac{1}{\lambda} = R_{\text{H}} \left(1 - \frac{1}{n^2} \right) \quad n = 2, 3, 4, \dots$$

(a) Calculate the wavelengths of the first three lines in this series. (b) Identify the region of the electromagnetic spectrum in which these lines appear.

- The wavelengths of the Paschen series for hydrogen are given by

$$\frac{1}{\lambda} = R_{\text{H}} \left(\frac{1}{3^2} - \frac{1}{n^2} \right) \quad n = 4, 5, 6, \dots$$

(a) Calculate the wavelengths of the first three lines in this series. (b) Identify the region of the electromagnetic spectrum in which these lines appear.

- An isolated atom of a certain element emits light of wavelength 520 nm when the atom falls from its fifth excited state into its second excited state. The atom emits a photon of wavelength 410 nm when it drops from its sixth excited state into its second excited state. Find the wavelength of the light radiated when the atom makes a transition from its sixth to its fifth excited state.

- An isolated atom of a certain element emits light of wavelength λ_{m1} when the atom falls from its state with quantum number m into its ground state of quantum number 1. The atom emits a photon of wavelength λ_{n1} when the atom falls from its state with quantum number n into its ground state. (a) Find the wavelength of the light radiated when the atom makes a transition from the m state to the n state. (b) Show that $k_{mn} = |k_{m1} - k_{n1}|$, where $k_{ij} = 2\pi/\lambda_{ij}$ is the wave number of the photon. This problem exemplifies the *Ritz combination principle*, an empirical rule formulated in 1908.

- (a) What value of n_i is associated with the 94.96-nm spectral line in the Lyman series of hydrogen? (b) **What If?** Could this wavelength be associated with the Paschen series? (c) Could this wavelength be associated with the Balmer series?

Section 42.2 Early Models of the Atom

- According to classical physics, a charge e moving with an acceleration a radiates energy at a rate

$$\frac{dE}{dt} = -\frac{1}{6\pi\epsilon_0} \frac{e^2 a^2}{c^3}$$

- (a) Show that an electron in a classical hydrogen atom (see Fig. 42.5) spirals into the nucleus at a rate

$$\frac{dr}{dt} = -\frac{e^4}{12\pi^2\epsilon_0^2 m_e^2 c^3} \left(\frac{1}{r^2}\right)$$

(b) Find the time interval over which the electron reaches $r = 0$, starting from $r_0 = 2.00 \times 10^{-10}$ m.

- 7. Review.** In the Rutherford scattering experiment, 4.00-MeV alpha particles scatter off gold nuclei (containing 79 protons and 118 neutrons). Assume a particular alpha particle moves directly toward the gold nucleus and scatters backward at 180° , and that the gold nucleus remains fixed throughout the entire process. Determine (a) the distance of closest approach of the alpha particle to the gold nucleus and (b) the maximum force exerted on the alpha particle.

Section 42.3 Bohr's Model of the Hydrogen Atom

Note: In this section, unless otherwise indicated, assume the hydrogen atom is treated with the Bohr model.

- 8.** Show that the speed of the electron in the n th Bohr orbit in hydrogen is given by
- $$v_n = \frac{k_e e^2}{n\hbar}$$
- 9.** How much energy is required to ionize hydrogen (a) when it is in the ground state and (b) when it is in the state for which $n = 3$?
- 10. M** What is the energy of a photon that, when absorbed by a hydrogen atom, could cause an electronic transition from (a) the $n = 2$ state to the $n = 5$ state and (b) the $n = 4$ state to the $n = 6$ state?
- 11.** A photon is emitted when a hydrogen atom undergoes a transition from the $n = 5$ state to the $n = 3$ state. Calculate (a) the energy (in electron volts), (b) the wavelength, and (c) the frequency of the emitted photon.
- 12.** The Balmer series for the hydrogen atom corresponds to electronic transitions that terminate in the state with quantum number $n = 2$ as shown in Figure P42.12. Consider the photon of longest wavelength corresponding to a transition shown in the figure. Determine (a) its energy and (b) its wavelength. Consider the spectral line of shortest wavelength corresponding to a transition shown in the figure. Find (c) its photon energy and (d) its wavelength. (e) What is the shortest possible wavelength in the Balmer series?

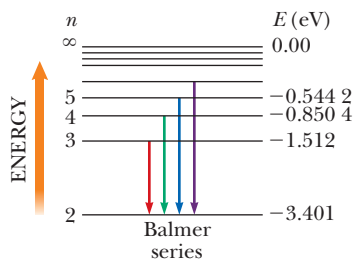


Figure P42.12

- 13.** For a hydrogen atom in its ground state, compute (a) the orbital speed of the electron, (b) the kinetic energy of the electron, and (c) the electric potential energy of the atom.

14. AMT Two hydrogen atoms collide head-on and end up with zero kinetic energy. Each atom then emits light with a wavelength of 121.6 nm ($n = 2$ to $n = 1$ transition). At what speed were the atoms moving before the collision?

15. (a) Calculate the angular momentum of the Moon due to its orbital motion about the Earth. In your calculation, use 3.84×10^8 m as the average Earth–Moon distance and 2.36×10^6 s as the period of the Moon in its orbit. (b) Assume that the Moon's angular momentum is described by Bohr's assumption $mvr = n\hbar$. Determine the corresponding quantum number. (c) By what fraction would the Earth–Moon distance have to be increased to raise the quantum number by 1?

16. W A monochromatic beam of light is absorbed by a collection of ground-state hydrogen atoms in such a way that six different wavelengths are observed when the hydrogen relaxes back to the ground state. (a) What is the wavelength of the incident beam? Explain the steps in your solution. (b) What is the longest wavelength in the emission spectrum of these atoms? (c) To what portion of the electromagnetic spectrum and (d) to what series does it belong? (e) What is the shortest wavelength? (f) To what portion of the electromagnetic spectrum and (g) to what series does it belong?

17. A hydrogen atom is in its second excited state, corresponding to $n = 3$. Find (a) the radius of the electron's Bohr orbit and (b) the de Broglie wavelength of the electron in this orbit.

18. M W A hydrogen atom is in its first excited state ($n = 2$). Calculate (a) the radius of the orbit, (b) the linear momentum of the electron, (c) the angular momentum of the electron, (d) the kinetic energy of the electron, (e) the potential energy of the system, and (f) the total energy of the system.

19. A photon with energy 2.28 eV is absorbed by a hydrogen atom. Find (a) the minimum n for a hydrogen atom that can be ionized by such a photon and (b) the speed of the electron released from the state in part (a) when it is far from the nucleus.

20. An electron is in the n th Bohr orbit of the hydrogen atom. (a) Show that the period of the electron is $T = n^3 t_0$ and determine the numerical value of t_0 . (b) On average, an electron remains in the $n = 2$ orbit for approximately $10 \mu\text{s}$ before it jumps down to the $n = 1$ (ground-state) orbit. How many revolutions does the electron make in the excited state? (c) Define the period of one revolution as an electron year, analogous to an Earth year being the period of the Earth's motion around the Sun. Explain whether we should think of the electron in the $n = 2$ orbit as "living for a long time."

21. (a) Construct an energy-level diagram for the He^+ ion, for which $Z = 2$, using the Bohr model. (b) What is the ionization energy for He^+ ?

Section 42.4 The Quantum Model of the Hydrogen Atom

22. A general expression for the energy levels of one-electron atoms and ions is

$$E_n = -\frac{\mu k_e^2 q_1^2 q_2^2}{2\hbar^2 n^2}$$

Here μ is the reduced mass of the atom, given by $\mu = m_1 m_2 / (m_1 + m_2)$, where m_1 is the mass of the electron and m_2 is the mass of the nucleus; k_e is the Coulomb constant; and q_1 and q_2 are the charges of the electron and the nucleus, respectively. The wavelength for the $n = 3$ to $n = 2$ transition of the hydrogen atom is 656.3 nm (visible red light). What are the wavelengths for this same transition in (a) positronium, which consists of an electron and a positron, and (b) singly ionized helium? *Note:* A positron is a positively charged electron.

23. Atoms of the same element but with different numbers of neutrons in the nucleus are called *isotopes*. Ordinary hydrogen gas is a mixture of two isotopes containing either one- or two-particle nuclei. These isotopes are hydrogen-1, with a proton nucleus, and hydrogen-2, called deuterium, with a deuteron nucleus. A deuteron is one proton and one neutron bound together. Hydrogen-1 and deuterium have identical chemical properties, but they can be separated via an ultracentrifuge or by other methods. Their emission spectra show lines of the same colors at very slightly different wavelengths. (a) Use the equation given in Problem 22 to show that the difference in wavelength between the hydrogen-1 and deuterium spectral lines associated with a particular electron transition is given by

$$\lambda_H - \lambda_D = \left(1 - \frac{\mu_H}{\mu_D}\right) \lambda_H$$

(b) Find the wavelength difference for the Balmer alpha line of hydrogen, with wavelength 656.3 nm, emitted by an atom making a transition from an $n = 3$ state to an $n = 2$ state. Harold Urey observed this wavelength difference in 1931 and so confirmed his discovery of deuterium.

24. An electron of momentum p is at a distance r from a stationary proton. The electron has kinetic energy $K = p^2/2m_e$. The atom has potential energy $U = -k_e e^2/r$ and total energy $E = K + U$. If the electron is bound to the proton to form a hydrogen atom, its average position is at the proton but the uncertainty in its position is approximately equal to the radius r of its orbit. The electron's average vector momentum is zero, but its average squared momentum is approximately equal to the squared uncertainty in its momentum as given by the uncertainty principle. Treating the atom as a one-dimensional system, (a) estimate the uncertainty in the electron's momentum in terms of r . Estimate the electron's (b) kinetic energy and (c) total energy in terms of r . The actual value of r is the one that *minimizes the total energy*, resulting in a stable atom. Find (d) that value of r and (e) the resulting total energy. (f) State how your answers compare with the predictions of the Bohr theory.

Section 42.5 The Wave Functions for Hydrogen

25. Plot the wave function $\psi_{1s}(r)$ versus r (see Eq. 42.22) and the radial probability density function $P_{1s}(r)$ versus r (see Eq. 42.25) for hydrogen. Let r range from 0 to $1.5a_0$, where a_0 is the Bohr radius.

26. For a spherically symmetric state of a hydrogen atom, the Schrödinger equation in spherical coordinates is

$$-\frac{\hbar^2}{2m_e} \left(\frac{d^2\psi}{dr^2} + \frac{2}{r} \frac{d\psi}{dr} \right) - \frac{k_e e^2}{r} \psi = E\psi$$

(a) Show that the $1s$ wave function for an electron in hydrogen,

$$\psi_{1s}(r) = \frac{1}{\sqrt{\pi a_0^3}} e^{-r/a_0}$$

satisfies the Schrödinger equation. (b) What is the energy of the atom for this state?

27. The radial function $R(r)$ of the wave function for a hydrogen atom in the $2p$ state is

$$\psi_{2p} = \frac{1}{\sqrt{3}(2a_0)^{3/2}} \frac{r}{a_0} e^{-r/2a_0}$$

What is the most likely distance from the nucleus to find an electron in the $2p$ state?

28. The ground-state wave function for the electron in a hydrogen atom is

$$\psi_{1s}(r) = \frac{1}{\sqrt{\pi a_0^3}} e^{-r/a_0}$$

where r is the radial coordinate of the electron and a_0 is the Bohr radius. (a) Show that the wave function as given is normalized. (b) Find the probability of locating the electron between $r_1 = a_0/2$ and $r_2 = 3a_0/2$.

29. In an experiment, a large number of electrons are fired at a sample of neutral hydrogen atoms and observations are made of how the incident particles scatter. The electron in the ground state of a hydrogen atom is found to be momentarily at a distance $a_0/2$ from the nucleus in 1 000 of the observations. In this set of trials, how many times is the atomic electron observed at a distance $2a_0$ from the nucleus?

Section 42.6 Physical Interpretation of the Quantum Numbers

30. List the possible sets of quantum numbers for the hydrogen atom associated with (a) the $3d$ subshell and (b) the $3p$ subshell.
31. If a hydrogen atom has orbital angular momentum $4.714 \times 10^{-34} \text{ J} \cdot \text{s}$, what is the orbital quantum number for the state of the atom?
32. Find all possible values of (a) L , (b) L_z , and (c) θ for a hydrogen atom in a $3d$ state.
33. Calculate the magnitude of the orbital angular momentum for a hydrogen atom in (a) the $4d$ state and (b) the $6f$ state.

34. How many sets of quantum numbers are possible for a hydrogen atom for which (a) $n = 1$, (b) $n = 2$, (c) $n = 3$, (d) $n = 4$, and (e) $n = 5$?
35. An electron in a sodium atom is in the N shell. Determine the maximum value the z component of its angular momentum could have.

36. (a) Find the mass density of a proton, modeling it as a solid sphere of radius $1.00 \times 10^{-15} \text{ m}$. (b) **What IF?** Consider a classical model of an electron as a uniform

solid sphere with the same density as the proton. Find its radius. (c) Imagine that this electron possesses spin angular momentum $I\omega = \hbar/2$ because of classical rotation about the z axis. Determine the speed of a point on the equator of the electron. (d) State how this speed compares with the speed of light.

37. A hydrogen atom is in its fifth excited state, with principal quantum number 6. The atom emits a photon with a wavelength of 1 090 nm. Determine the maximum possible magnitude of the orbital angular momentum of the atom after emission.
38. *Why is the following situation impossible?* A photon of wavelength 88.0 nm strikes a clean aluminum surface, ejecting a photoelectron. The photoelectron then strikes a hydrogen atom in its ground state, transferring energy to it and exciting the atom to a higher quantum state.
39. The ρ^- meson has a charge of $-e$, a spin quantum number of 1, and a mass 1 507 times that of the electron. The possible values for its spin magnetic quantum number are -1 , 0 , and 1 . **What If?** Imagine that the electrons in atoms are replaced by ρ^- mesons. List the possible sets of quantum numbers for ρ^- mesons in the $3d$ subshell.

Section 42.7 The Exclusion Principle and the Periodic Table

40. (a) As we go down the periodic table, which subshell is filled first, the $3d$ or the $4s$ subshell? (b) Which electronic configuration has a lower energy, $[\text{Ar}]3d^44s^2$ or $[\text{Ar}]3d^54s^1$? *Note:* The notation $[\text{Ar}]$ represents the filled configuration for argon. *Suggestion:* Which has the greater number of unpaired spins? (c) Identify the element with the electronic configuration in part (b).
41. (a) Write out the electronic configuration of the ground state for nitrogen ($Z = 7$). (b) Write out the values for the possible set of quantum numbers n , ℓ , m_ℓ , and m_s for the electrons in nitrogen.
42. Devise a table similar to that shown in Figure 42.18 for atoms containing 11 through 19 electrons. Use Hund's rule and educated guesswork.
43. A certain element has its outermost electron in a $3p$ subshell. It has valence $+3$ because it has three more electrons than a certain noble gas. What element is it?
44. Scanning through Figure 42.19 in order of increasing atomic number, notice that the electrons usually fill the subshells in such a way that those subshells with the lowest values of $n + \ell$ are filled first. If two subshells have the same value of $n + \ell$, the one with the lower value of n is generally filled first. Using these two rules, write the order in which the subshells are filled through $n + \ell = 7$.
45. Two electrons in the same atom both have $n = 3$ and $\ell = 1$. Assume the electrons are distinguishable, so that interchanging them defines a new state. (a) How many states of the atom are possible considering the quantum numbers these two electrons can have? (b) **What If?** How many states would be possible if the exclusion principle were inoperative?

46. For a neutral atom of element 110, what would be the probable ground-state electronic configuration?

47. **Review.** For an electron with magnetic moment $\vec{\mu}_s$ in a magnetic field \vec{B} , Section 29.5 showed the following. The electron-field system can be in a higher energy state with the z component of the electron's magnetic moment opposite the field or a lower energy state with the z component of the magnetic moment in the direction of the field. The difference in energy between the two states is $2\mu_B B$.

Under high resolution, many spectral lines are observed to be doublets. The most famous doublet is the pair of two yellow lines in the spectrum of sodium (the D lines), with wavelengths of 588.995 nm and 589.592 nm. Their existence was explained in 1925 by Goudsmit and Uhlenbeck, who postulated that an electron has intrinsic spin angular momentum. When the sodium atom is excited with its outermost electron in a $3p$ state, the orbital motion of the outermost electron creates a magnetic field. The atom's energy is somewhat different depending on whether the electron is itself spin-up or spin-down in this field. Then the photon energy the atom radiates as it falls back into its ground state depends on the energy of the excited state. Calculate the magnitude of the internal magnetic field, mediating this so-called spin-orbit coupling.

Section 42.8 More on Atomic Spectra: Visible and X-Ray

48. In x-ray production, electrons are accelerated through a high voltage ΔV and then decelerated by striking a target. Show that the shortest wavelength of an x-ray that can be produced is

$$\lambda_{\min} = \frac{1240 \text{ nm} \cdot \text{V}}{\Delta V}$$

49. What minimum accelerating voltage would be required to produce an x-ray with a wavelength of 70.0 pm?
50. A tungsten target is struck by electrons that have been accelerated from rest through a 40.0-keV potential difference. Find the shortest wavelength of the radiation emitted.
51. A bismuth target is struck by electrons, and x-rays are emitted. Estimate (a) the M- to L-shell transitional energy for bismuth and (b) the wavelength of the x-ray emitted when an electron falls from the M shell to the L shell.
52. The $3p$ level of sodium has an energy of -3.0 eV, and the $3d$ level has an energy of -1.5 eV. (a) Determine Z_{eff} for each of these states. (b) Explain the difference.
53. (a) Determine the possible values of the quantum numbers ℓ and m_ℓ for the He^+ ion in the state corresponding to $n = 3$. (b) What is the energy of this state?
54. The K series of the discrete spectrum of tungsten contains wavelengths of 0.018 5 nm, 0.020 9 nm, and 0.021 5 nm. The K-shell ionization energy is 69.5 keV. Determine the ionization energies of the L, M, and N shells.
55. Use the method illustrated in Example 42.5 to calculate the wavelength of the x-ray emitted from a

molybdenum target ($Z = 42$) when an electron moves from the L shell ($n = 2$) to the K shell ($n = 1$).

56. In x-ray production, electrons are accelerated through a high voltage and then decelerated by striking a target. (a) To make possible the production of x-rays of wavelength λ , what is the minimum potential difference ΔV through which the electrons must be accelerated? (b) State in words how the required potential difference depends on the wavelength. (c) Explain whether your result predicts the correct minimum wavelength in Figure 42.22. (d) Does the relationship from part (a) apply to other kinds of electromagnetic radiation besides x-rays? (e) What does the potential difference approach as λ goes to zero? (f) What does the potential difference approach as λ increases without limit?
57. When an electron drops from the M shell ($n = 3$) to a vacancy in the K shell ($n = 1$), the measured wavelength of the emitted x-ray is found to be 0.101 nm. Identify the element.

Section 42.9 Spontaneous and Stimulated Transitions

Section 42.10 Lasers

58. Figure P42.58 shows portions of the energy-level diagrams of the helium and neon atoms. An electrical discharge excites the He atom from its ground state (arbitrarily assigned the energy $E_1 = 0$) to its excited state of 20.61 eV. The excited He atom collides with a Ne atom in its ground state and excites this atom to the state at 20.66 eV. Lasing action takes place for electron transitions from E_3^* to E_2 in the Ne atoms. From the data in the figure, show that the wavelength of the red He–Ne laser light is approximately 633 nm.

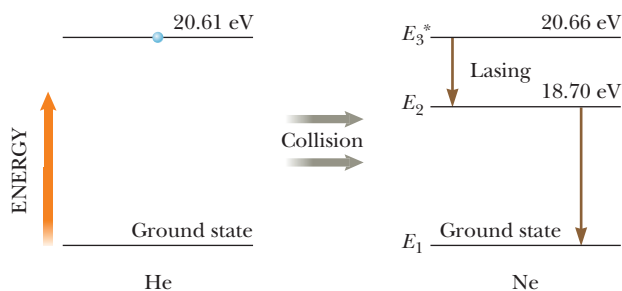


Figure P42.58

59. The carbon dioxide laser is one of the most powerful developed. The energy difference between the two laser levels is 0.117 eV. Determine (a) the frequency and (b) the wavelength of the radiation emitted by this laser. (c) In what portion of the electromagnetic spectrum is this radiation?
60. **Review.** A helium–neon laser can produce a green laser beam instead of a red one. Figure P42.60 shows the transitions involved to form the red beam and the green beam. After a population inversion is established, neon atoms make a variety of downward transitions in falling from the state labeled E_4^* down eventually to level E_1 (arbitrarily assigned the energy $E_1 = 0$). The atoms emit both red light with a wavelength

of 632.8 nm in a transition $E_4^* - E_3$ and green light with a wavelength of 543 nm in a competing transition $E_4^* - E_2$. (a) What is the energy E_2 ? Assume the atoms are in a cavity between mirrors designed to reflect the green light with high efficiency but to allow the red light to leave the cavity immediately. Then stimulated emission can lead to the buildup of a collimated beam of green light between the mirrors having a greater intensity than that of the red light. To constitute the radiated laser beam, a small fraction of the green light is permitted to escape by transmission through one mirror. The mirrors forming the resonant cavity can be made of layers of silicon dioxide (index of refraction $n = 1.458$) and titanium dioxide (index of refraction varies between 1.9 and 2.6). (b) How thick a layer of silicon dioxide, between layers of titanium dioxide, would minimize reflection of the red light? (c) What should be the thickness of a similar but separate layer of silicon dioxide to maximize reflection of the green light?

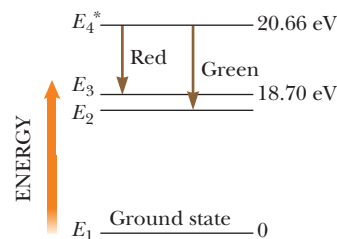


Figure P42.60 Problems 60 and 62.

61. **M** A ruby laser delivers a 10.0-ns pulse of 1.00-MW average power. If the photons have a wavelength of 694.3 nm, how many are contained in the pulse?
62. The number N of atoms in a particular state is called the population of that state. This number depends on the energy of that state and the temperature. In thermal equilibrium, the population of atoms in a state of energy E_n is given by a Boltzmann distribution expression

$$N = N_g e^{-(E_n - E_g)/k_B T}$$

where N_g is the population of the ground state of energy E_g , k_B is Boltzmann's constant, and T is the absolute temperature. For simplicity, assume each energy level has only one quantum state associated with it. (a) Before the power is switched on, the neon atoms in a laser are in thermal equilibrium at 27.0°C. Find the equilibrium ratio of the populations of the states E_4^* and E_3 shown for the red transition in Figure P42.60. Lasers operate by a clever artificial production of a "population inversion" between the upper and lower atomic energy states involved in the lasing transition. This term means that more atoms are in the upper excited state than in the lower one. Consider the $E_4^* - E_3$ transition in Figure P42.60. Assume 2% more atoms occur in the upper state than in the lower. (b) To demonstrate how unnatural such a situation is, find the temperature for which the Boltzmann distribution describes a 2.00% population inversion. (c) Why does such a situation not occur naturally?

63. A neodymium–yttrium–aluminum garnet laser used in eye surgery emits a 3.00-mJ pulse in 1.00 ns, focused to a spot 30.0 μm in diameter on the retina. (a) Find (in SI units) the power per unit area at the retina. (In the optics industry, this quantity is called the *irradiance*.) (b) What energy is delivered by the pulse to an area of molecular size, taken as a circular area 0.600 nm in diameter?

64. Review. Figure 42.29 represents the light bouncing between two mirrors in a laser cavity as two traveling waves. These traveling waves moving in opposite directions constitute a standing wave. If the reflecting surfaces are metallic films, the electric field has nodes at both ends. The electromagnetic standing wave is analogous to the standing string wave represented in Figure 18.10. (a) Assume that a helium–neon laser has precisely flat and parallel mirrors 35.124 103 cm apart. Assume that the active medium can efficiently amplify only light with wavelengths between 632.808 40 nm and 632.809 80 nm. Find the number of components that constitute the laser light, and the wavelength of each component, precise to eight digits. (b) Find the root-mean-square speed for a neon atom at 120°C. (c) Show that at this temperature the Doppler effect for light emission by moving neon atoms should realistically make the bandwidth of the light amplifier larger than the 0.001 40 nm assumed in part (a).

Additional Problems

65. How much energy is required to ionize a hydrogen atom when it is in (a) the $n = 2$ state and (b) the $n = 10$ state?

66. The force on a magnetic moment μ_z in a nonuniform magnetic field B_z is given by $F_z = \mu_z(dB_z/dz)$. If a beam of silver atoms travels a horizontal distance of 1.00 m through such a field and each atom has a speed of 100 m/s, how strong must be the field gradient dB_z/dz to deflect the beam 1.00 mm?

67. Suppose a hydrogen atom is in the 2s state, with its wave function given by Equation 42.26. Taking $r = a_0$, calculate values for (a) $\psi_{2s}(a_0)$, (b) $|\psi_{2s}(a_0)|^2$, and (c) $P_{2s}(a_0)$.

68. Review. (a) How much energy is required to cause an electron in hydrogen to move from the $n = 1$ state to the $n = 2$ state? (b) Suppose the atom gains this energy through collisions among hydrogen atoms at a high temperature. At what temperature would the average atomic kinetic energy $\frac{3}{2}k_B T$ be great enough to excite the electron? Here k_B is Boltzmann's constant.

69. In the technique known as electron spin resonance (ESR), a sample containing unpaired electrons is placed in a magnetic field. Consider a situation in which a single electron (not contained in an atom) is immersed in a magnetic field. In this simple situation, only two energy states are possible, corresponding to $m_s = \pm\frac{1}{2}$. In ESR, the absorption of a photon causes the electron's spin magnetic moment to flip from the lower energy state to the higher energy state. According to Section 29.5, the change in energy is $2\mu_B B$. (The

lower energy state corresponds to the case in which the z component of the magnetic moment $\vec{\mu}_{\text{spin}}$ is aligned with the magnetic field, and the higher energy state corresponds to the case in which the z component of $\vec{\mu}_{\text{spin}}$ is aligned opposite to the field.) What is the photon frequency required to excite an ESR transition in a 0.350-T magnetic field?

70. An electron in chromium moves from the $n = 2$ state to the $n = 1$ state without emitting a photon. Instead, the excess energy is transferred to an outer electron (one in the $n = 4$ state), which is then ejected by the atom. In this Auger (pronounced "ohjay") process, the ejected electron is referred to as an Auger electron. Use the Bohr theory to find the kinetic energy of the Auger electron.

71. The states of matter are solid, liquid, gas, and plasma. Plasma can be described as a gas of charged particles or a gas of ionized atoms. Most of the matter in the Solar System is plasma (throughout the interior of the Sun). In fact, most of the matter in the Universe is plasma; so is a candle flame. Use the information in Figure 42.20 to make an order-of-magnitude estimate for the temperature to which a typical chemical element must be raised to turn into plasma by ionizing most of the atoms in a sample. Explain your reasoning.

72. Show that the wave function for a hydrogen atom in the 2s state

$$\psi_{2s}(r) = \frac{1}{4\sqrt{2\pi}} \left(\frac{1}{a_0}\right)^{3/2} \left(2 - \frac{r}{a_0}\right) e^{-r/2a_0}$$

satisfies the spherically symmetric Schrödinger equation given in Problem 26.

73. Find the average (expectation) value of $1/r$ in the 1s state of hydrogen. Note that the general expression is given by

$$\langle 1/r \rangle = \int_{\text{all space}} |\psi|^2 (1/r) dV = \int_0^\infty P(r) (1/r) dr$$

Is the result equal to the inverse of the average value of r ?

74. Why is the following situation impossible? An experiment is performed on an atom. Measurements of the atom when it is in a particular excited state show five possible values of the z component of orbital angular momentum, ranging between $3.16 \times 10^{-34} \text{ kg} \cdot \text{m}^2/\text{s}$ and $-3.16 \times 10^{-34} \text{ kg} \cdot \text{m}^2/\text{s}$.

75. In the Bohr model of the hydrogen atom, an electron travels in a circular path. Consider another case in which an electron travels in a circular path: a single electron moving perpendicular to a magnetic field \mathbf{B} . Lev Davidovich Landau (1908–1968) solved the Schrödinger equation for such an electron. The electron can be considered as a model atom without a nucleus or as the irreducible quantum limit of the cyclotron. Landau proved its energy is quantized in uniform steps of $e\hbar B/m_e$. In 1999, a single electron was trapped by a Harvard University research team in an evacuated centimeter-size metal can cooled to a temperature of 80 mK. In a magnetic field of magnitude

5.26 T, the electron circulated for hours in its lowest energy level. (a) Evaluate the size of a quantum jump in the electron's energy. (b) For comparison, evaluate $k_B T$ as a measure of the energy available to the electron in blackbody radiation from the walls of its container. Microwave radiation was introduced to excite the electron. Calculate (c) the frequency and (d) the wavelength of the photon the electron absorbed as it jumped to its second energy level. Measurement of the resonant absorption frequency verified the theory and permitted precise determination of properties of the electron.

76. As the Earth moves around the Sun, its orbits are quantized. (a) Follow the steps of Bohr's analysis of the hydrogen atom to show that the allowed radii of the Earth's orbit are given by

$$r = \frac{n^2 \hbar^2}{GM_S M_E^2}$$

where n is an integer quantum number, M_S is the mass of the Sun, and M_E is the mass of the Earth. (b) Calculate the numerical value of n for the Sun–Earth system. (c) Find the distance between the orbit for quantum number n and the next orbit out from the Sun corresponding to the quantum number $n + 1$. (d) Discuss the significance of your results from parts (b) and (c).

77. An elementary theorem in statistics states that the root-mean-square uncertainty in a quantity r is given by $\Delta r = \sqrt{\langle r^2 \rangle - \langle r \rangle^2}$. Determine the uncertainty in the radial position of the electron in the ground state of the hydrogen atom. Use the average value of r found in Example 42.3: $\langle r \rangle = 3a_0/2$. The average value of the squared distance between the electron and the proton is given by

$$\langle r^2 \rangle = \int_{\text{all space}} |\psi|^2 r^2 dV = \int_0^\infty P(r) r^2 dr$$

78. Example 42.3 calculates the most probable value and the average value for the radial coordinate r of the electron in the ground state of a hydrogen atom. For comparison with these modal and mean values, find the median value of r . Proceed as follows. (a) Derive an expression for the probability, as a function of r , that the electron in the ground state of hydrogen will be found outside a sphere of radius r centered on the nucleus. (b) Make a graph of the probability as a function of r/a_0 . Choose values of r/a_0 ranging from 0 to 4.00 in steps of 0.250. (c) Find the value of r for which the probability of finding the electron outside a sphere of radius r is equal to the probability of finding the electron inside this sphere. You must solve a transcendental equation numerically, and your graph is a good starting point.

79. (a) For a hydrogen atom making a transition from the $n = 4$ state to the $n = 2$ state, determine the wavelength of the photon created in the process. (b) Assuming the atom was initially at rest, determine the recoil speed of the hydrogen atom when it emits this photon.

80. Astronomers observe a series of spectral lines in the light from a distant galaxy. On the hypothesis that the

lines form the Lyman series for a (new?) one-electron atom, they start to construct the energy-level diagram shown in Figure P42.80, which gives the wavelengths of the first four lines and the short-wavelength limit of this series. Based on this information, calculate (a) the energies of the ground state and first four excited states for this one-electron atom and (b) the wavelengths of the first three lines and the short-wavelength limit in the Balmer series for this atom. (c) Show that the wavelengths of the first four lines and the short-wavelength limit of the Lyman series for the hydrogen atom are all 60.0% of the wavelengths for the Lyman series in the one-electron atom in the distant galaxy. (d) Based on this observation, explain why this atom could be hydrogen.

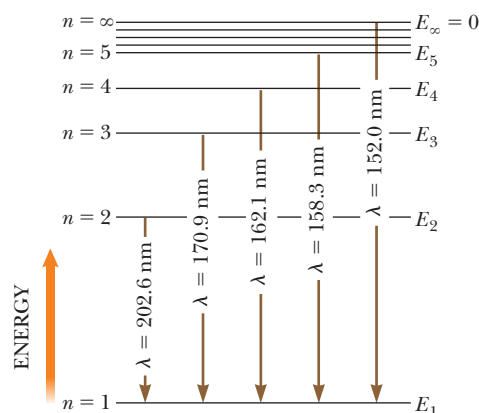


Figure P42.80

81. We wish to show that the most probable radial position for an electron in the $2s$ state of hydrogen is $r = 5.236a_0$.

- (a) Use Equations 42.24 and 42.26 to find the radial probability density for the $2s$ state of hydrogen. (b) Calculate the derivative of the radial probability density with respect to r . (c) Set the derivative in part (b) equal to zero and identify three values of r that represent minima in the function. (d) Find two values of r that represent maxima in the function. (e) Identify which of the values in part (c) represents the highest probability.

82. All atoms have the same size, to an order of magnitude. (a) To demonstrate this fact, estimate the atomic diameters for aluminum (with molar mass 27.0 g/mol and density 2.70 g/cm³) and uranium (molar mass 238 g/mol and density 18.9 g/cm³). (b) What do the results of part (a) imply about the wave functions for inner-shell electrons as we progress to higher and higher atomic mass atoms?

83. A pulsed ruby laser emits light at 694.3 nm. For a 14.0-ps pulse containing 3.00 J of energy, find (a) the physical length of the pulse as it travels through space and (b) the number of photons in it. (c) The beam has a circular cross section of diameter 0.600 cm. Find the number of photons per cubic millimeter.

84. A pulsed laser emits light of wavelength λ . For a pulse of duration Δt having energy T_{ER} , find (a) the physical length of the pulse as it travels through space and (b) the number of photons in it. (c) The beam has a

circular cross section having diameter d . Find the number of photons per unit volume.

85. Assume three identical uncharged particles of mass m and spin $\frac{1}{2}$ are contained in a one-dimensional box of length L . What is the ground-state energy of this system?
86. Suppose the ionization energy of an atom is 4.10 eV. In the spectrum of this same atom, we observe emission lines with wavelengths 310 nm, 400 nm, and 1377.8 nm. Use this information to construct the energy-level diagram with the fewest levels. Assume the higher levels are closer together.
87. For hydrogen in the 1s state, what is the probability of finding the electron farther than $2.50a_0$ from the nucleus?
88. For hydrogen in the 1s state, what is the probability of finding the electron farther than βa_0 from the nucleus, where β is an arbitrary number?

Challenge Problems

89. The positron is the antiparticle to the electron. It has the same mass and a positive electric charge of the same magnitude as that of the electron. Positronium is a hydrogen-like atom consisting of a positron and an electron revolving around each other. Using the Bohr model, find (a) the allowed distances between the two particles and (b) the allowed energies of the system.
90. **Review.** Steven Chu, Claude Cohen-Tannoudji, and William Phillips received the 1997 Nobel Prize in Physics for “the development of methods to cool and

trap atoms with laser light.” One part of their work was with a beam of atoms (mass $\sim 10^{-25}$ kg) that move at a speed on the order of 1 km/s, similar to the speed of molecules in air at room temperature. An intense laser light beam tuned to a visible atomic transition (assume 500 nm) is directed straight into the atomic beam; that is, the atomic beam and the light beam are traveling in opposite directions. An atom in the ground state immediately absorbs a photon. Total system momentum is conserved in the absorption process. After a lifetime on the order of 10^{-8} s, the excited atom radiates by spontaneous emission. It has an equal probability of emitting a photon in any direction. Therefore, the average “recoil” of the atom is zero over many absorption and emission cycles. (a) Estimate the average deceleration of the atomic beam. (b) What is the order of magnitude of the distance over which the atoms in the beam are brought to a halt?


91. (a) Use Bohr’s model of the hydrogen atom to show that when the electron moves from the n state to the $n - 1$ state, the frequency of the emitted light is

$$f = \left(\frac{2\pi^2 m_e k_e^2 e^4}{h^3} \right) \frac{2n - 1}{n^2(n - 1)^2}$$

(b) Bohr’s correspondence principle claims that quantum results should reduce to classical results in the limit of large quantum numbers. Show that as $n \rightarrow \infty$, this expression varies as $1/n^3$ and reduces to the classical frequency one expects the atom to emit. *Suggestion:* To calculate the classical frequency, note that the frequency of revolution is $v/2\pi r$, where v is the speed of the electron and r is given by Equation 42.10.

Molecules and Solids

- 43.1 Molecular Bonds
- 43.2 Energy States and Spectra of Molecules
- 43.3 Bonding in Solids
- 43.4 Free-Electron Theory of Metals
- 43.5 Band Theory of Solids
- 43.6 Electrical Conduction in Metals, Insulators, and Semiconductors
- 43.7 Semiconductor Devices
- 43.8 Superconductivity



The photograph shows a *NEMS resonator*, where NEMS is an acronym for *nanoelectromechanical system*. The device employs a semiconductor bridge vibrating in a standing wave like the strings in Chapter 18. When a single molecule or other particle adheres to the bridge, the resonance frequencies of the normal modes shift in a measurable way. Scientists can determine the mass of the particle from the shifts in the frequencies. The new device shows promise in allowing the masses of molecules and many biological particles to be measured with great accuracy. (Caltech/Scott Kelberg and Michael Roukes)

The most random atomic arrangement, that of a gas, was well understood in the 1800s as discussed in our study of kinetic theory in Chapter 21. In a crystalline solid, the atoms are not randomly arranged; rather, they form a regular array. The symmetry of the arrangement of atoms both stimulated and allowed rapid progress in the field of solid-state physics in the 20th century. Recently, our understanding of liquids and amorphous solids has advanced. (In an amorphous solid such as glass or paraffin, the atoms do not form a regular array.) The recent interest in the physics of low-cost amorphous materials has been driven by their use in such devices as solar cells, memory elements, and fiber-optic waveguides. With the addition of liquids, amorphous solids, and some more exotic forms of matter, such as Bose-Einstein condensates, solid-state physics expanded in the middle of the 20th century to become known as *condensed matter physics*.

We begin this chapter by studying the aggregates of atoms known as molecules. We describe the bonding mechanisms in molecules, the various modes of molecular excitation, and the radiation emitted or absorbed by molecules. Next, we show how molecules combine to form solids. Then, by examining their energy-level structure, we explain the differences between insulating, conducting, semiconducting, and superconducting materials. The chapter also includes discussions of semiconducting junctions and several semiconductor devices.

43.1 Molecular Bonds

The bonding mechanisms in a molecule are fundamentally due to electric forces between atoms (or ions). Because the electric force is conservative, the forces between atoms in the system of a molecule are related to a potential energy function. A stable molecule is expected at a configuration for which the potential energy function for the molecule has its minimum value. (See Section 7.9.)

A potential energy function that can be used to model a molecule should account for two known features of molecular bonding:

1. The force between atoms is repulsive at very small separation distances. When two atoms are brought close to each other, some of their electron shells overlap, resulting in repulsion between the shells. This repulsion is partly electrostatic in origin and partly the result of the exclusion principle. Because all electrons must obey the exclusion principle, some electrons in the overlapping shells are forced into higher energy states and the system energy increases as if a repulsive force existed between the atoms.
2. At somewhat larger separations, the force between atoms is attractive. If that were not true, the atoms in a molecule would not be bound together.

Taking into account these two features, the potential energy for a system of two atoms can be represented by an expression of the form

$$U(r) = -\frac{A}{r^n} + \frac{B}{r^m} \quad (43.1)$$

where r is the internuclear separation distance between the two atoms and n and m are small integers. The parameter A is associated with the attractive force and B with the repulsive force. Example 7.9 gives one common model for such a potential energy function, the Lennard-Jones potential.

Potential energy versus internuclear separation distance for a two-atom system is graphed in Figure 43.1. At large separation distances between the two atoms, the slope of the curve is positive, corresponding to a net attractive force. At the equilibrium separation distance, the attractive and repulsive forces just balance. At this point, the potential energy has its minimum value and the slope of the curve is zero.

A complete description of the bonding mechanisms in molecules is highly complex because bonding involves the mutual interactions of many particles. In this section, we discuss only some simplified models.

Ionic Bonding

When two atoms combine in such a way that one or more outer electrons are transferred from one atom to the other, the bond formed is called an **ionic bond**. Ionic bonds are fundamentally caused by the Coulomb attraction between oppositely charged ions.

A familiar example of an ionically bonded solid is sodium chloride, NaCl, which is common table salt. Sodium, which has the electronic configuration $1s^2 2s^2 2p^6 3s^1$, is ionized relatively easily, giving up its $3s$ electron to form a Na^+ ion. The energy required to ionize the atom to form Na^+ is 5.1 eV. Chlorine, which has the electronic configuration $1s^2 2s^2 2p^5$, is one electron short of the filled-shell structure of argon. If we compare the energy of a system of a free electron and a Cl atom with one in which the electron joins the atom to make the Cl^- ion, we find that the energy of the ion is lower. When the electron makes a transition from the $E = 0$ state to the negative energy state associated with the available shell in the atom, energy is released. This amount of energy is called the **electron affinity** of the atom. For chlorine, the electron affinity is 3.6 eV. Therefore, the energy required to form Na^+ and Cl^- from isolated atoms is $5.1 - 3.6 = 1.5$ eV. It costs 5.1 eV to remove

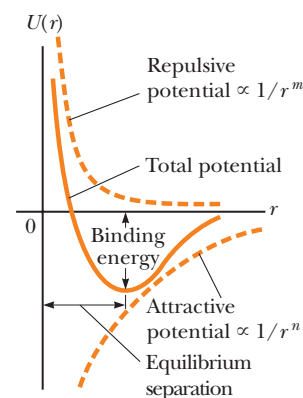
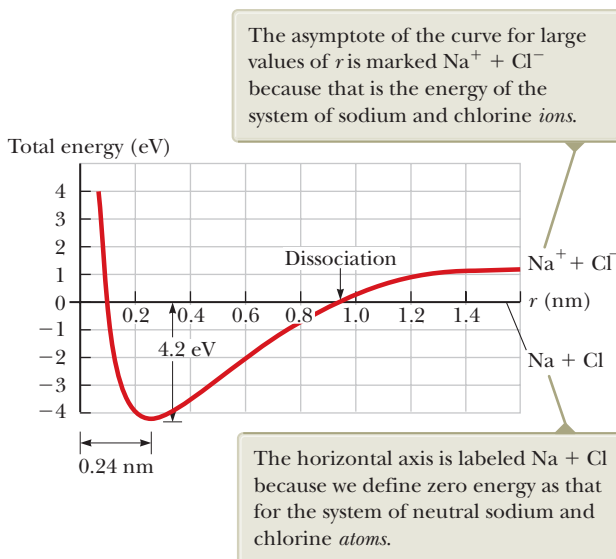


Figure 43.1 Total potential energy as a function of internuclear separation distance for a system of two atoms.

Figure 43.2 Total energy versus internuclear separation distance for Na^+ and Cl^- ions.



Pitfall Prevention 43.1

Ionic and Covalent Bonds In practice, these descriptions of ionic and covalent bonds represent extreme ends of a spectrum of bonds involving electron transfer. In a real bond, the electron may not be *completely* transferred as in an ionic bond or *equally* shared as in a covalent bond. Therefore, real bonds lie somewhere between these extremes.

the electron from the Na atom, but 3.6 eV of it is gained back when that electron is allowed to join with the Cl atom.

Now imagine that these two charged ions interact with one another to form a NaCl “molecule.”¹ The total energy of the NaCl molecule versus internuclear separation distance is graphed in Figure 43.2. At very large separation distances, the energy of the system of ions is 1.5 eV as calculated above. The total energy has a minimum value of -4.2 eV at the equilibrium separation distance, which is approximately 0.24 nm. Hence, the energy required to break the $\text{Na}^+ - \text{Cl}^-$ bond and form neutral sodium and chlorine atoms, called the **dissociation energy**, is 4.2 eV. The energy of the molecule is lower than that of the system of two neutral atoms. Consequently, it is **energetically favorable** for the molecule to form: if a lower energy state of a system exists, the system tends to emit energy to achieve this lower energy state. The system of neutral sodium and chlorine atoms can reduce its total energy by transferring energy out of the system (by electromagnetic radiation, for example) and forming the NaCl molecule.

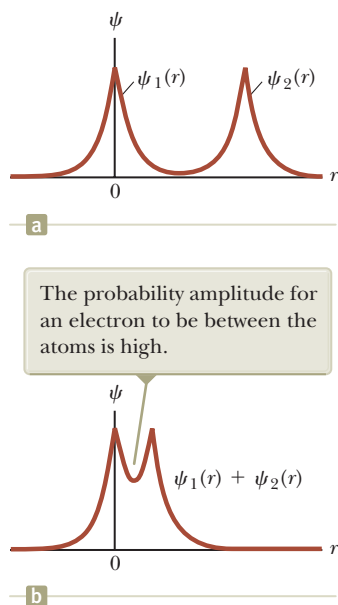


Figure 43.3 Ground-state wave functions $\psi_1(r)$ and $\psi_2(r)$ for two atoms making a covalent bond. (a) The atoms are far apart, and their wave functions overlap minimally. (b) The atoms are close together, forming a composite wave function $\psi_1(r) + \psi_2(r)$ for the system.

Covalent Bonding

A **covalent bond** between two atoms is one in which electrons supplied by either one or both atoms are shared by the two atoms. Many diatomic molecules—such as H_2 , F_2 , and CO —owe their stability to covalent bonds. The bond between two hydrogen atoms can be described by using atomic wave functions. The ground-state wave function for a hydrogen atom (Chapter 42) is

$$\psi_{1s}(r) = \frac{1}{\sqrt{\pi a_0^3}} e^{-r/a_0}$$

This wave function is graphed in Figure 43.3a for two hydrogen atoms that are far apart. There is very little overlap of the wave functions $\psi_1(r)$ for atom 1, located at $r = 0$, and $\psi_2(r)$ for atom 2, located some distance away. Suppose now the two atoms are brought close together. As that happens, their wave functions overlap and form the compound wave function $\psi_1(r) + \psi_2(r)$ shown in Figure 43.3b. Notice that the probability amplitude is larger between the atoms than it is on either side of the combination of atoms. As a result, the probability is higher that the electrons associated with the atoms will be located between the atoms than on the outer regions

¹NaCl does not tend to form as an isolated molecule at room temperature. In the solid state, NaCl forms a crystalline array of ions as described in Section 43.3. In the liquid state or in solution with water, the Na^+ and Cl^- ions dissociate and are free to move relative to each other.

of the system. Consequently, the average position of negative charge in the system is halfway between the atoms. This scenario can be modeled as if there were a fixed negative charge between the atoms, exerting attractive Coulomb forces on both nuclei. Therefore, there is an overall attractive force between the atoms, resulting in a covalent bond.

Because of the exclusion principle, the two electrons in the ground state of H_2 must have antiparallel spins. Also because of the exclusion principle, if a third H atom is brought near the H_2 molecule, the third electron would have to occupy a higher energy level, which is not an energetically favorable situation. For this reason, the H_3 molecule is not stable and does not form.

Van der Waals Bonding

Ionic and covalent bonds occur between atoms to form molecules or ionic solids, so they can be described as bonds *within* molecules. Two additional types of bonds, van der Waals bonds and hydrogen bonds, can occur *between* molecules.

You might think that two neutral molecules would not interact by means of the electric force because they each have zero net charge. They are attracted to each other, however, by weak electrostatic forces called **van der Waals forces**. Likewise, atoms that do not form ionic or covalent bonds are attracted to each other by van der Waals forces. Noble gas atoms, for example, because of their filled shell structure, do not generally form molecules or bond to each other to form a liquid. Because of van der Waals forces, however, at sufficiently low temperatures at which thermal excitations are negligible, noble gases first condense to liquids and then solidify. (The exception is helium, which does not solidify at atmospheric pressure.)

The van der Waals force results from the following situation. While being electrically neutral, a molecule has a charge distribution with positive and negative centers at different positions in the molecule. As a result, the molecule may act as an electric dipole. (See Section 23.4.) Because of the dipole electric fields, two molecules can interact such that there is an attractive force between them.

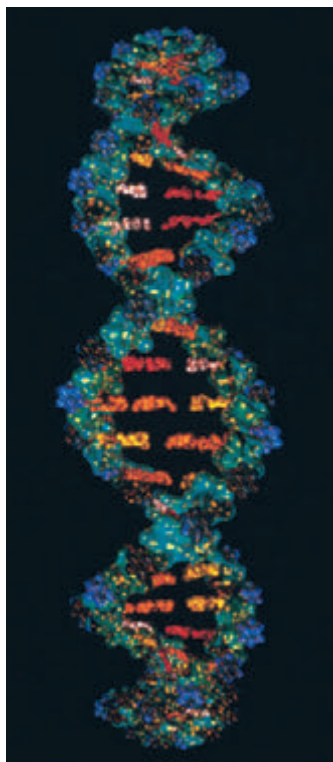
There are three types of van der Waals forces. The first type, called the *dipole–dipole force*, is an interaction between two molecules each having a permanent electric dipole moment. For example, polar molecules such as HCl have permanent electric dipole moments and attract other polar molecules.

The second type, the *dipole–induced dipole force*, results when a polar molecule having a permanent electric dipole moment induces a dipole moment in a nonpolar molecule. In this case, the electric field of the polar molecule creates the dipole moment in the nonpolar molecule, which then results in an attractive force between the molecules.

The third type is called the *dispersion force*, an attractive force that occurs between two nonpolar molecules. In this case, although the average dipole moment of a nonpolar molecule is zero, the average of the square of the dipole moment is non-zero because of charge fluctuations. Two nonpolar molecules near each other tend to have dipole moments that are correlated in time so as to produce an attractive van der Waals force.

Hydrogen Bonding

Because hydrogen has only one electron, it is expected to form a covalent bond with only one other atom within a molecule. A hydrogen atom in a given molecule can also form a second type of bond between molecules called a **hydrogen bond**. Let's use the water molecule H_2O as an example. In the two covalent bonds in this molecule, the electrons from the hydrogen atoms are more likely to be found near the oxygen atom than near the hydrogen atoms, leaving essentially bare protons at the positions of the hydrogen atoms. This unshielded positive charge can be attracted to the negative end of another polar molecule. Because the proton is unshielded by electrons, the negative end of the other molecule can come very close to the proton to form a bond strong enough to form a solid crystalline structure, such as



Douglas Struthers/Stone/Getty Images

Figure 43.4 DNA molecules are held together by hydrogen bonds.

Total energy of a molecule ▶

that of ordinary ice. The bonds within a water molecule are covalent, but the bonds between water molecules in ice are hydrogen bonds.

The hydrogen bond is relatively weak compared with other chemical bonds and can be broken with an input energy of approximately 0.1 eV. Because of this weakness, ice melts at the low temperature of 0°C. Even though this bond is weak, however, hydrogen bonding is a critical mechanism responsible for the linking of biological molecules and polymers. For example, in the case of the DNA (deoxyribonucleic acid) molecule, which has a double-helix structure (Fig. 43.4), hydrogen bonds form by the sharing of a proton between two atoms and create linkages between the turns of the helix.

- Quick Quiz 43.1** For each of the following atoms or molecules, identify the most likely type of bonding that occurs between the atoms or between the molecules. Choose from the following list: ionic, covalent, van der Waals, hydrogen. (a) atoms of krypton (b) potassium and chlorine atoms (c) hydrogen fluoride (HF) molecules (d) chlorine and oxygen atoms in a hypochlorite ion (ClO^-)

43.2 Energy States and Spectra of Molecules

Consider an individual molecule in the gaseous phase of a substance. The energy E of the molecule can be divided into four categories: (1) electronic energy, due to the interactions between the molecule's electrons and nuclei; (2) translational energy, due to the motion of the molecule's center of mass through space; (3) rotational energy, due to the rotation of the molecule about its center of mass; and (4) vibrational energy, due to the vibration of the molecule's constituent atoms:

$$E = E_{\text{el}} + E_{\text{trans}} + E_{\text{rot}} + E_{\text{vib}}$$

We explored the roles of translational, rotational, and vibrational energy of molecules in determining the molar specific heats of gases in Sections 21.2 and 21.3. The translational energy is important in kinetic theory, but it is unrelated to internal structure of the molecule, so this molecular energy is unimportant in interpreting molecular spectra. The electronic energy of a molecule is very complex because it involves the interaction of many charged particles, but various techniques have been developed to approximate its values. Although the electronic energies can be studied, significant information about a molecule can be determined by analyzing its quantized rotational and vibrational energy states. Transitions between these states give spectral lines in the microwave and infrared regions of the electromagnetic spectrum, respectively.

Rotational Motion of Molecules

Let's consider the rotation of a molecule around its center of mass, confining our discussion to the diatomic molecule (Fig. 43.5a) but noting that the same ideas can be extended to polyatomic molecules. A diatomic molecule aligned along a y axis has only two rotational degrees of freedom, corresponding to rotations about the x and z axes passing through the molecule's center of mass. We discussed the rotation of such a molecule and its contribution to the specific heat of a gas in Section 21.3. If ω is the angular frequency of rotation about one of these axes, the rotational kinetic energy of the molecule about that axis can be expressed with Equation 10.24:

$$E_{\text{rot}} = \frac{1}{2}I\omega^2 \quad (43.2)$$

In this equation, I is the moment of inertia of the molecule about its center of mass, given by

$$I = \left(\frac{m_1 m_2}{m_1 + m_2} \right) r^2 = \mu r^2 \quad (43.3)$$

Moment of inertia for a diatomic molecule ▶

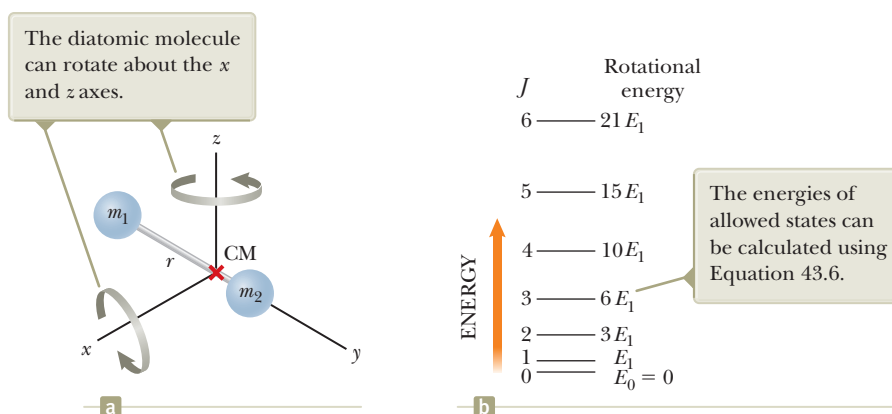


Figure 43.5 Rotation of a diatomic molecule around its center of mass. (a) A diatomic molecule oriented along the y axis. (b) Allowed rotational energies of a diatomic molecule expressed as multiples of $E_1 = \hbar^2/I$.

where m_1 and m_2 are the masses of the atoms that form the molecule, r is the atomic separation, and μ is the **reduced mass** of the molecule (see Example 41.5 and Problem 40 in Chapter 41):

$$\mu = \frac{m_1 m_2}{m_1 + m_2} \quad (43.4)$$

The magnitude of the molecule's angular momentum about its center of mass is given by Equation 11.14, $L = I\omega$, which classically can have any value. Quantum mechanics, however, restricts the molecule to certain quantized rotational frequencies such that the angular momentum of the molecule has the values²

$$L = \sqrt{J(J+1)} \hbar \quad J = 0, 1, 2, \dots \quad (43.5)$$

where J is an integer called the **rotational quantum number**. Combining Equations 43.5 and 43.2, we obtain an expression for the allowed values of the rotational kinetic energy of the molecule:

$$E_{\text{rot}} = \frac{1}{2}I\omega^2 = \frac{1}{2I}(I\omega)^2 = \frac{L^2}{2I} = \frac{(\sqrt{J(J+1)} \hbar)^2}{2I}$$

$$E_{\text{rot}} = E_J = \frac{\hbar^2}{2I} J(J+1) \quad J = 0, 1, 2, \dots \quad (43.6)$$

The allowed rotational energies of a diatomic molecule are plotted in Figure 43.5b. As the quantum number J goes up, the states become farther apart as displayed earlier for rotational energy levels in Figure 21.7.

For most molecules, transitions between adjacent rotational levels result in radiation that lies in the microwave range of frequencies ($f \sim 10^{11}$ Hz). When a molecule absorbs a microwave photon, the molecule jumps from a lower rotational energy level to a higher one. The allowed rotational transitions of linear molecules are regulated by the selection rule $\Delta J = \pm 1$. Given this selection rule, all absorption lines in the spectrum of a linear molecule correspond to energy separations equal to $E_J - E_{J-1}$, where $J = 1, 2, 3, \dots$. From Equation 43.6, we see that the energies of the absorbed photons are given by

$$E_{\text{photon}} = \Delta E_{\text{rot}} = E_J - E_{J-1} = \frac{\hbar^2}{2I} [J(J+1) - (J-1)J]$$

$$E_{\text{photon}} = \frac{\hbar^2}{I} J = \frac{h^2}{4\pi^2 I} J \quad J = 1, 2, 3, \dots \quad (43.7)$$

²Equation 43.5 is similar to Equation 42.27 for orbital angular momentum in an atom. The relationship between the magnitude of the angular momentum of a system and the associated quantum number is the same as it is in these equations for *any* system that exhibits rotation as long as the potential energy function for the system is spherically symmetric.

◀ Reduced mass of a diatomic molecule

◀ Allowed values of rotational angular momentum

◀ Allowed values of rotational energy

◀ Energy of a photon absorbed in a transition between adjacent rotational levels

where J is the rotational quantum number of the higher energy state. Because $E_{\text{photon}} = hf$, where f is the frequency of the absorbed photon, we see that the allowed frequency for the transition $J = 0$ to $J = 1$ is $f_1 = h/4\pi^2 I$. The frequency corresponding to the $J = 1$ to $J = 2$ transition is $2f_1$, and so on. These predictions are in excellent agreement with the observed frequencies.

Quick Quiz 43.2 A gas of identical diatomic molecules absorbs electromagnetic radiation over a wide range of frequencies. Molecule 1 is in the $J = 0$ rotation state and makes a transition to the $J = 1$ state. Molecule 2 is in the $J = 2$ state and makes a transition to the $J = 3$ state. Is the ratio of the frequency of the photon that excited molecule 2 to that of the photon that excited molecule 1 equal to (a) 1, (b) 2, (c) 3, (d) 4, or (e) impossible to determine?

Example 43.1 Rotation of the CO Molecule

The $J = 0$ to $J = 1$ rotational transition of the CO molecule occurs at a frequency of 1.15×10^{11} Hz.

(A) Use this information to calculate the moment of inertia of the molecule.

SOLUTION

Conceptualize Imagine that the two atoms in Figure 43.5a are carbon and oxygen. The center of mass of the molecule is not midway between the atoms because of the difference in masses of the C and O atoms.

Categorize The statement of the problem tells us to categorize this example as one involving a quantum-mechanical treatment and to restrict our investigation to the rotational motion of a diatomic molecule.

Analyze Use Equation 43.7 to find the energy of a photon that excites the molecule from the $J = 0$ to the $J = 1$ rotational level:

$$E_{\text{photon}} = \frac{h^2}{4\pi^2 I} (1) = \frac{h^2}{4\pi^2 I}$$

Equate this energy to $E = hf$ for the absorbed photon and solve for I :

$$\frac{h^2}{4\pi^2 I} = hf \rightarrow I = \frac{h}{4\pi^2 f}$$

Substitute the frequency given in the problem statement:

$$I = \frac{6.626 \times 10^{-34} \text{ J} \cdot \text{s}}{4\pi^2 (1.15 \times 10^{11} \text{ s}^{-1})} = 1.46 \times 10^{-46} \text{ kg} \cdot \text{m}^2$$

(B) Calculate the bond length of the molecule.

SOLUTION

Find the reduced mass μ of the CO molecule:

$$\begin{aligned} \mu &= \frac{m_1 m_2}{m_1 + m_2} = \frac{(12 \text{ u})(16 \text{ u})}{12 \text{ u} + 16 \text{ u}} = 6.86 \text{ u} \\ &= (6.86 \text{ u}) \left(\frac{1.66 \times 10^{-27} \text{ kg}}{1 \text{ u}} \right) = 1.14 \times 10^{-26} \text{ kg} \end{aligned}$$

Solve Equation 43.3 for r and substitute for the reduced mass and the moment of inertia from part (A):

$$\begin{aligned} r &= \sqrt{\frac{I}{\mu}} = \sqrt{\frac{1.46 \times 10^{-46} \text{ kg} \cdot \text{m}^2}{1.14 \times 10^{-26} \text{ kg}}} \\ &= 1.13 \times 10^{-10} \text{ m} = 0.113 \text{ nm} \end{aligned}$$

Finalize The moment of inertia of the molecule and the separation distance between the atoms are both very small, as expected for a microscopic system.

WHAT IF? What if another photon of frequency 1.15×10^{11} Hz is incident on the CO molecule while that molecule is in the $J = 1$ state? What happens?

Answer Because the rotational quantum states are not equally spaced in energy, the $J = 1$ to $J = 2$ transition does not have the same energy as the $J = 0$ to $J = 1$ transition. Therefore, the molecule will *not* be excited to the $J = 2$ state. Two

43.1 continued

possibilities exist. The photon could pass by the molecule with no interaction, or the photon could induce a stimulated emission, similar to that for atoms and discussed in Section 42.9. In this case, the molecule makes a transition back to the $J = 0$ state and the original photon and a second identical photon leave the scene of the interaction.

Vibrational Motion of Molecules

If we consider a molecule to be a flexible structure in which the atoms are bonded together by “effective springs” as shown in Figure 43.6a, we can apply the particle in simple harmonic motion analysis model to the molecule as long as the atoms in the molecule are not too far from their equilibrium positions. Recall from Section 15.3 that the potential energy function for a simple harmonic oscillator is parabolic, varying as the square of the position of the particle relative to the equilibrium position. (See Eq. 15.20 and Fig. 15.9b.) Figure 43.6b shows a plot of potential energy versus atomic separation for a diatomic molecule, where r_0 is the equilibrium atomic separation. For separations close to r_0 , the shape of the potential energy curve closely resembles the parabolic shape of the potential energy function in the particle in simple harmonic motion model.

According to classical mechanics, the frequency of vibration for the system shown in Figure 43.6a is given by Equation 15.14:

$$f = \frac{1}{2\pi} \sqrt{\frac{k}{\mu}} \quad (43.8)$$

where k is the effective spring constant and μ is the reduced mass given by Equation 43.4. In Section 21.3, we studied the contribution of a molecule’s vibration to the specific heats of gases.

Quantum mechanics predicts that a molecule vibrates in quantized states as described in Section 41.7. The vibrational motion and quantized vibrational energy can be altered if the molecule acquires energy of the proper value to cause a transition between quantized vibrational states. As discussed in Section 41.7, the allowed vibrational energies are

$$E_{\text{vib}} = \left(v + \frac{1}{2}\right)hf \quad v = 0, 1, 2, \dots \quad (43.9)$$

where v is an integer called the **vibrational quantum number**. (We used n in Section 41.7 for a general harmonic oscillator, but v is often used for the quantum number when discussing molecular vibrations.) If the system is in the lowest vibrational state, for which $v = 0$, its ground-state energy is $\frac{1}{2}hf$. In the first excited vibrational state, $v = 1$ and the energy is $\frac{3}{2}hf$, and so on.

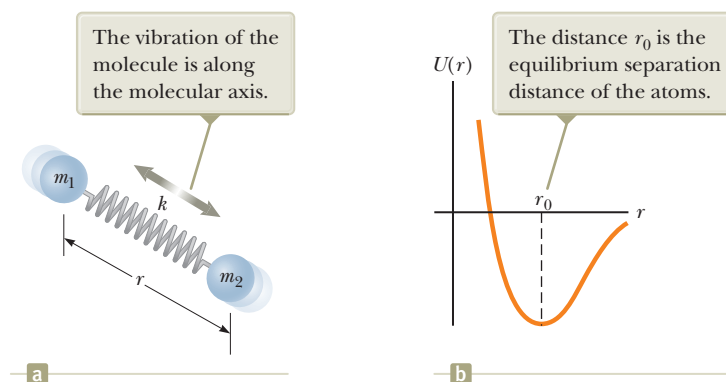
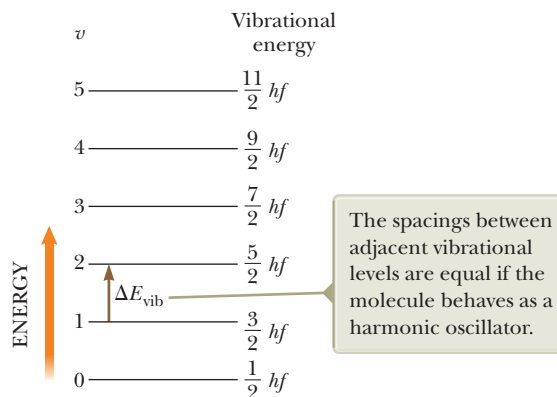


Figure 43.6 (a) Effective-spring model of a diatomic molecule. (b) Plot of the potential energy of a diatomic molecule versus atomic separation distance. Compare with Figure 15.11a.

Figure 43.7 Allowed vibrational energies of a diatomic molecule, where f is the frequency of vibration of the molecule, given by Equation 43.8.



Substituting Equation 43.8 into Equation 43.9 gives the following expression for the allowed vibrational energies:

Allowed values of
vibrational energy

$$E_{\text{vib}} = \left(v + \frac{1}{2}\right) \frac{h}{2\pi} \sqrt{\frac{k}{\mu}} \quad v = 0, 1, 2, \dots \quad (43.10)$$

The selection rule for the allowed vibrational transitions is $\Delta v = \pm 1$. Transitions between vibrational levels are caused by absorption of photons in the infrared region of the spectrum. The energy of an absorbed photon is equal to the energy difference between any two successive vibrational levels. Therefore, the photon energy is given by

$$E_{\text{photon}} = \Delta E_{\text{vib}} = \frac{h}{2\pi} \sqrt{\frac{k}{\mu}} \quad (43.11)$$

The vibrational energies of a diatomic molecule are plotted in Figure 43.7. At ordinary temperatures, most molecules have vibrational energies corresponding to the $v = 0$ state because the spacing between vibrational states is much greater than $k_{\text{B}}T$, where k_{B} is Boltzmann's constant and T is the temperature.

- Quick Quiz 43.3** A gas of identical diatomic molecules absorbs electromagnetic radiation over a wide range of frequencies. Molecule 1, initially in the $v = 0$ vibrational state, makes a transition to the $v = 1$ state. Molecule 2, initially in the $v = 2$ state, makes a transition to the $v = 3$ state. What is the ratio of the frequency of the photon that excited molecule 2 to that of the photon that excited molecule 1? (a) 1 (b) 2 (c) 3 (d) 4 (e) impossible to determine

Example 43.2

Vibration of the CO Molecule AM

The frequency of the photon that causes the $v = 0$ to $v = 1$ transition in the CO molecule is 6.42×10^{13} Hz. We ignore any changes in the rotational energy for this example.

(A) Calculate the force constant k for this molecule.

SOLUTION

Conceptualize Imagine that the two atoms in Figure 43.6a are carbon and oxygen. As the molecule vibrates, a given point on the imaginary spring is at rest. This point is not midway between the atoms because of the difference in masses of the C and O atoms.

Categorize The statement of the problem tells us to categorize this example as one involving a quantum-mechanical treatment and to restrict our investigation to the vibrational motion of a diatomic molecule. The molecule is analyzed with portions of the *particle in simple harmonic motion* analysis model.

43.2 continued

Analyze Set Equation 43.11 equal to the photon energy hf and solve for the force constant:

$$\frac{h}{2\pi} \sqrt{\frac{k}{\mu}} = hf \rightarrow k = 4\pi^2 \mu f^2$$

Substitute the frequency given in the problem statement and the reduced mass from Example 43.1:

$$k = 4\pi^2 (1.14 \times 10^{-26} \text{ kg})(6.42 \times 10^{13} \text{ s}^{-1})^2 = 1.85 \times 10^3 \text{ N/m}$$

(B) What is the classical amplitude A of vibration for this molecule in the $v = 0$ vibrational state?

SOLUTION

Equate the maximum elastic potential energy $\frac{1}{2}kA^2$ in the molecule (Eq. 15.21) to the vibrational energy given by Equation 43.10 with $v = 0$ and solve for A :

$$\frac{1}{2}kA^2 = \frac{h}{4\pi} \sqrt{\frac{k}{\mu}} \rightarrow A = \sqrt{\frac{h}{2\pi}} \left(\frac{1}{\mu k}\right)^{1/4}$$

Substitute the value for k from part (A) and the value for μ :

$$A = \sqrt{\frac{6.626 \times 10^{-34} \text{ J} \cdot \text{s}}{2\pi}} \left[\frac{1}{(1.14 \times 10^{-26} \text{ kg})(1.85 \times 10^3 \text{ N/m})} \right]^{1/4}$$

$$= 4.79 \times 10^{-12} \text{ m} = 0.00479 \text{ nm}$$

Finalize Comparing this result with the bond length of 0.113 nm we calculated in Example 43.1 shows that the classical amplitude of vibration is approximately 4% of the bond length.

Molecular Spectra

In general, a molecule vibrates and rotates simultaneously. To a first approximation, these motions are independent of each other, so the total energy of the molecule for these motions is the sum of Equations 43.6 and 43.9:

$$E = (v + \frac{1}{2})hf + \frac{\hbar^2}{2I} J(J + 1) \quad (43.12)$$

The energy levels of any molecule can be calculated from this expression, and each level is indexed by the two quantum numbers v and J . From these calculations, an energy-level diagram like the one shown in Figure 43.8a (page 1350) can be constructed. For each allowed value of the vibrational quantum number v , there is a complete set of rotational levels corresponding to $J = 0, 1, 2, \dots$. The energy separation between successive rotational levels is much smaller than the separation between successive vibrational levels. As noted earlier, most molecules at ordinary temperatures are in the $v = 0$ vibrational state; these molecules can be in various rotational states as Figure 43.8a shows.

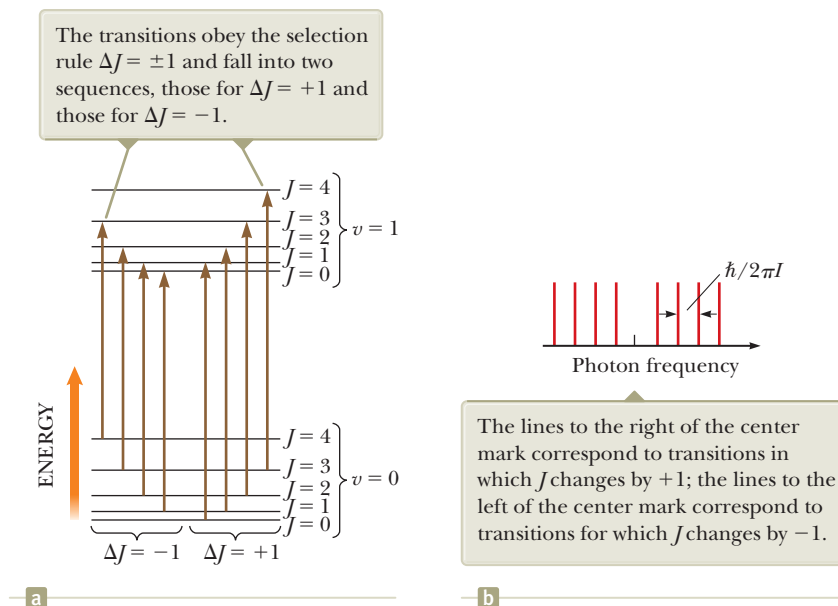
When a molecule absorbs a photon with the appropriate energy, the vibrational quantum number v increases by one unit while the rotational quantum number J either increases or decreases by one unit as can be seen in Figure 43.8. Therefore, the molecular absorption spectrum in Figure 43.8b consists of two groups of lines: one group to the right of center and satisfying the selection rules $\Delta J = +1$ and $\Delta v = +1$, and the other group to the left of center and satisfying the selection rules $\Delta J = -1$ and $\Delta v = +1$.

The energies of the absorbed photons can be calculated from Equation 43.12:

$$E_{\text{photon}} = \Delta E = hf + \frac{\hbar^2}{I} (J + 1) \quad J = 0, 1, 2, \dots \quad (\Delta J = +1) \quad (43.13)$$

$$E_{\text{photon}} = \Delta E = hf - \frac{\hbar^2}{I} J \quad J = 1, 2, 3, \dots \quad (\Delta J = -1) \quad (43.14)$$

Figure 43.8 (a) Absorptive transitions between the $v = 0$ and $v = 1$ vibrational states of a diatomic molecule. Compare the energy levels in this figure with those in Figure 21.7. (b) Expected lines in the absorption spectrum of a molecule. These same lines appear in the emission spectrum.



where J is the rotational quantum number of the *initial* state. Equation 43.13 generates the series of equally spaced lines *higher* than the frequency f , whereas Equation 43.14 generates the series *lower* than this frequency. Adjacent lines are separated in frequency by the fundamental unit $\hbar/2\pi I$. Figure 43.8b shows the expected frequencies in the absorption spectrum of the molecule; these same frequencies appear in the emission spectrum.

The experimental absorption spectrum of the HCl molecule shown in Figure 43.9 follows this pattern very well and reinforces our model. One peculiarity is apparent, however: each line is split into a doublet. This doubling occurs because two chlorine isotopes (Cl-35 and Cl-37; see Section 44.1) were present in the sample used to obtain this spectrum. Because the isotopes have different masses, the two HCl molecules have different values of I .

The intensity of the spectral lines in Figure 43.9 follows an interesting pattern, rising first as one moves away from the central gap (located at about 8.65×10^{13} Hz, corresponding to the forbidden $J = 0$ to $J = 0$ transition) and then falling. This intensity is determined by a product of two functions of J . The first function corresponds to the number of available states for a given value of J . This function is $2J + 1$, corresponding to the number of values of m_J , the molecular rotation analog to m_ℓ for atomic states. For example, the $J = 2$ state has five substates with five values of m_J ($m_J = -2, -1, 0, 1, 2$), whereas the $J = 1$ state has only three substates ($m_J = -1, 0, 1$). Therefore, on average and without regard for the second function described below, five-thirds as many molecules make the transition from the $J = 2$ state as from the $J = 1$ state.

The second function determining the envelope of the intensity of the spectral lines is the Boltzmann factor, introduced in Section 21.5. The number of molecules in an excited rotational state is given by

$$n = n_0 e^{-\hbar^2 J(J+1)/(2Ik_B T)}$$

where n_0 is the number of molecules in the $J = 0$ state.

Multiplying these factors together indicates that the intensity of spectral lines should be described by a function of J as follows:

$$I \propto (2J + 1) e^{-\hbar^2 J(J+1)/(2Ik_B T)} \quad (43.15)$$

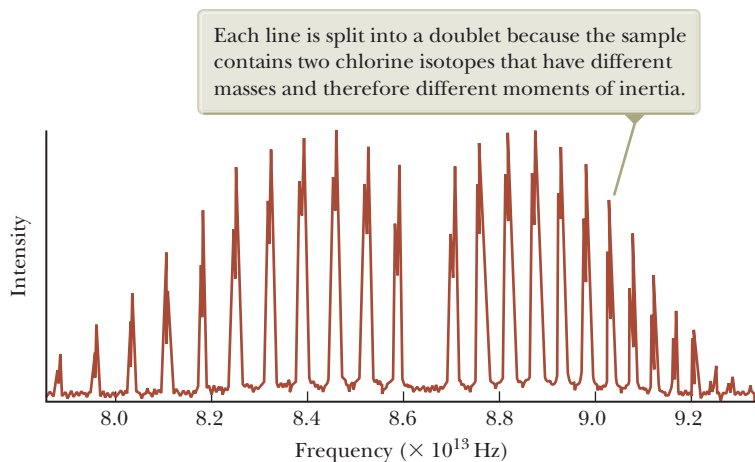


Figure 43.9 Experimental absorption spectrum of the HCl molecule.

The factor $(2J + 1)$ increases with J while the exponential second factor decreases. The product of the two factors gives a behavior that closely describes the envelope of the spectral lines in Figure 43.9.

The excitation of rotational and vibrational energy levels is an important consideration in current models of global warming. Most of the absorption lines for CO_2 are in the infrared portion of the spectrum. Therefore, visible light from the Sun is not absorbed by atmospheric CO_2 but instead strikes the Earth's surface, warming it. In turn, the surface of the Earth, being at a much lower temperature than the Sun, emits thermal radiation that peaks in the infrared portion of the electromagnetic spectrum (Section 40.1). This infrared radiation is absorbed by the CO_2 molecules in the air instead of radiating out into space. Atmospheric CO_2 acts like a one-way valve for energy from the Sun and is responsible, along with some other atmospheric molecules, for raising the temperature of the Earth's surface above its value in the absence of an atmosphere. This phenomenon is commonly called the "greenhouse effect." The burning of fossil fuels in today's industrialized society adds more CO_2 to the atmosphere. This addition of CO_2 increases the absorption of infrared radiation, raising the Earth's temperature further. In turn, this increase in temperature causes substantial climatic changes.

As seen in Figure 43.10, the amount of carbon dioxide in the atmosphere has been steadily increasing since the middle of the 20th century. This graph shows hard data that indicate that the atmosphere is undergoing a distinct change, although not all scientists agree on the interpretation of what that change means in terms of global temperatures.

The Intergovernmental Panel on Climate Change (IPCC) is a scientific body that assesses the available information related to global warming and associated effects

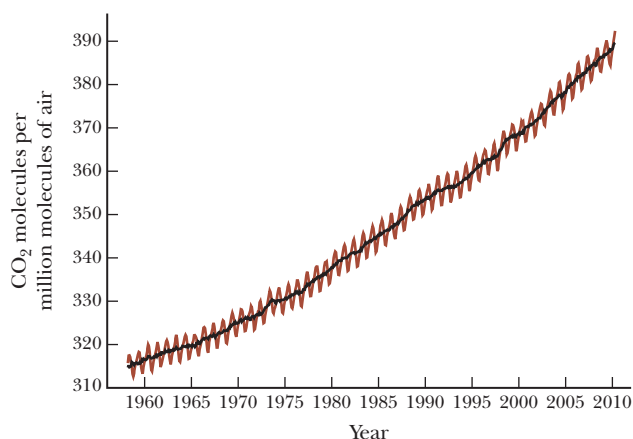


Figure 43.10 The concentration of atmospheric carbon dioxide in parts per million (ppm) of dry air as a function of time. These data were recorded at the Mauna Loa Observatory in Hawaii. The yearly variations (red-brown curve) coincide with growing seasons because vegetation absorbs carbon dioxide from the air. The steady increase in the average concentration (black curve) is of concern to scientists.

related to climate change. It was originally established in 1988 by two United Nations organizations, the World Meteorological Organization and the United Nations Environment Programme. The IPCC has published four assessment reports on climate change, the most recent in 2007, and a fifth report is scheduled to be released in 2014. The 2007 report concludes that there is a probability of greater than 90% that the increased global temperature measured by scientists is due to the placement of greenhouse gases such as carbon dioxide in the atmosphere by humans. The report also predicts a global temperature increase between 1°C and 6°C in the 21st century, a sea level rise from 18 cm to 59 cm, and very high probabilities of weather extremes, including heat waves, droughts, cyclones, and heavy rainfall.

In addition to its scientific aspects, global warming is a social issue with many facets. These facets encompass international politics and economics, because global warming is a worldwide problem. Changing our policies requires real costs to solve the problem. Global warming also has technological aspects, and new methods of manufacturing, transportation, and energy supply must be designed to slow down or reverse the increase in temperature.

Conceptual Example 43.3

Comparing Figures 43.8 and 43.9

In Figure 43.8a, the transitions indicated correspond to spectral lines that are equally spaced as shown in Figure 43.8b. The actual spectrum in Figure 43.9, however, shows lines that move closer together as the frequency increases. Why does the spacing of the actual spectral lines differ from the diagram in Figure 43.8?

SOLUTION

In Figure 43.8, we modeled the rotating diatomic molecule as a rigid object (Chapter 10). In reality, however, as the molecule rotates faster and faster, the effective spring in Figure 43.6a stretches and provides the increased force associated with the larger centripetal acceleration of each atom. As the molecule stretches along its length, its moment of inertia I increases. Therefore, the rotational part of the energy expression in Equation 43.12 has an extra dependence on J in the moment of inertia I . Because the increasing moment of inertia is in the denominator, as J increases, the energies do not increase as rapidly with J as indicated in Equation 43.12. With each higher energy level being lower than indicated by Equation 43.12, the energy associated with a transition to that level is smaller, as is the frequency of the absorbed photon, destroying the even spacing of the spectral lines and giving the spacing that decreases with increasing frequency seen in Figure 43.9.

43.3 Bonding in Solids

A crystalline solid consists of a large number of atoms arranged in a regular array, forming a periodic structure. The ions in the NaCl crystal are ionically bonded, as already noted, and the carbon atoms in diamond form covalent bonds with one another. The metallic bond described at the end of this section is responsible for the cohesion of copper, silver, sodium, and other solid metals.

Ionic Solids

Many crystals are formed by ionic bonding, in which the dominant interaction between ions is the Coulomb force. Consider a portion of the NaCl crystal shown in Figure 43.11a. The red spheres are sodium ions, and the blue spheres are chlorine ions. As shown in Figure 43.11b, each Na^+ ion has six nearest-neighbor Cl^- ions. Similarly, in Figure 43.11c, we see that each Cl^- ion has six nearest-neighbor Na^+ ions. Each Na^+ ion is attracted to its six Cl^- neighbors. The corresponding potential energy is $-6k_e e^2/r$, where k_e is the Coulomb constant and r is the separation distance between each Na^+ and Cl^- . In addition, there are 12 next-nearest-neighbor

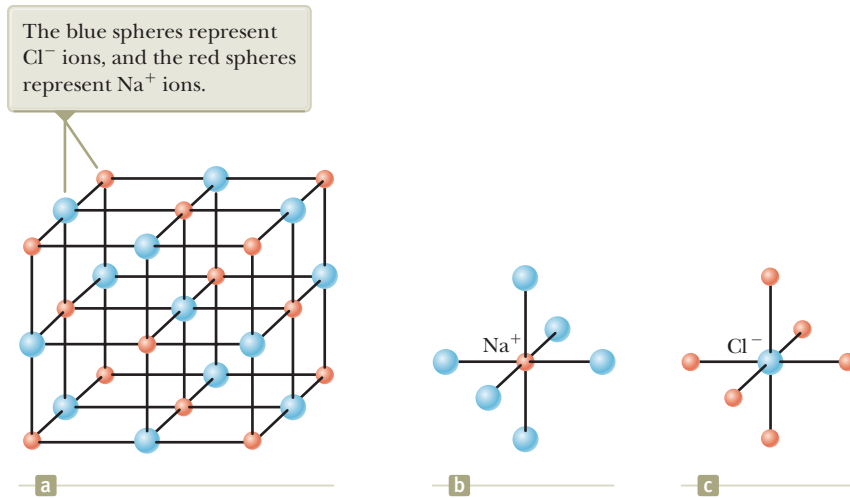


Figure 43.11 (a) Crystalline structure of NaCl. (b) Each positive sodium ion is surrounded by six negative chlorine ions. (c) Each chlorine ion is surrounded by six sodium ions.

Na^+ ions at a distance of $\sqrt{2}r$ from the Na^+ ion, and these 12 positive ions exert weaker repulsive forces on the central Na^+ . Furthermore, beyond these 12 Na^+ ions are more Cl^- ions that exert an attractive force, and so on. The net effect of all these interactions is a resultant negative electric potential energy

$$U_{\text{attractive}} = -\alpha k_e \frac{e^2}{r} \quad (43.16)$$

where α is a dimensionless number known as the **Madelung constant**. The value of α depends only on the particular crystalline structure of the solid. For example, $\alpha = 1.7476$ for the NaCl structure. When the constituent ions of a crystal are brought close together, a repulsive force exists because of electrostatic forces and the exclusion principle as discussed in Section 43.1. The potential energy term B/r^m in Equation 43.1 accounts for this repulsive force. We do not include neighbors other than nearest neighbors here because the repulsive forces occur only for ions that are very close together. (Electron shells must overlap for exclusion-principle effects to become important.) Therefore, we can express the total potential energy of the crystal as

$$U_{\text{total}} = -\alpha k_e \frac{e^2}{r} + \frac{B}{r^m} \quad (43.17)$$

where m in this expression is some small integer.

A plot of total potential energy versus ion separation distance is shown in Figure 43.12. The potential energy has its minimum value U_0 at the equilibrium separation, when $r = r_0$. It is left as a problem (Problem 59) to show that

$$U_0 = -\alpha k_e \frac{e^2}{r_0} \left(1 - \frac{1}{m} \right) \quad (43.18)$$

This minimum energy U_0 is called the **ionic cohesive energy** of the solid, and its absolute value represents the energy required to separate the solid into a collection of isolated positive and negative ions. Its value for NaCl is -7.84 eV per ion pair.

To calculate the **atomic cohesive energy**, which is the binding energy relative to the energy of the neutral atoms, 5.14 eV must be added to the ionic cohesive energy value to account for the transition from Na^+ to Na and 3.62 eV must be subtracted to account for the conversion of Cl^- to Cl. Therefore, the atomic cohesive energy of NaCl is

$$-7.84 \text{ eV} + 5.14 \text{ eV} - 3.62 \text{ eV} = -6.32 \text{ eV}$$

In other words, 6.32 eV of energy per ion pair is needed to separate the solid into isolated neutral atoms of Na and Cl.

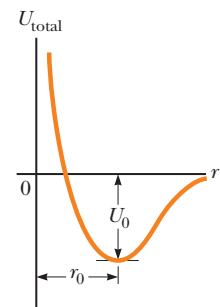
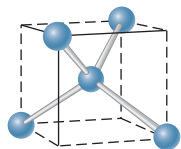
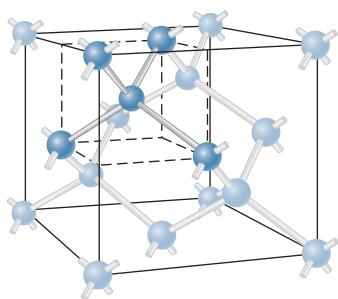


Figure 43.12 Total potential energy versus ion separation distance for an ionic solid, where U_0 is the ionic cohesive energy and r_0 is the equilibrium separation distance between ions.

Ionic crystals form relatively stable, hard crystals. They are poor electrical conductors because they contain no free electrons; each electron in the solid is bound tightly to one of the ions, so it is not sufficiently mobile to carry current. Ionic crystals have high melting points; for example, the melting point of NaCl is 801°C. Ionic crystals are transparent to visible radiation because the shells formed by the electrons in ionic solids are so tightly bound that visible radiation does not possess sufficient energy to promote electrons to the next allowed shell. Infrared radiation is absorbed strongly because the vibrations of the ions have natural resonant frequencies in the low-energy infrared region.




a



b

Figure 43.13 (a) Each carbon atom in a diamond crystal is covalently bonded to four other carbon atoms so that a tetrahedral structure is formed. (b) The crystal structure of diamond, showing the tetrahedral bond arrangement.



A cylinder of nearly pure crystalline silicon (Si), approximately 25 cm long. Such crystals are cut into wafers and processed to make various semiconductor devices.

© Cengage Learning/Charles D. Winters

Covalent Solids

Solid carbon, in the form of diamond, is a crystal whose atoms are covalently bonded. Because atomic carbon has the electronic configuration $1s^2 2s^2 2p^2$, it is four electrons short of filling its $n = 2$ shell, which can accommodate eight electrons. Because of this electron structure, two carbon atoms have a strong attraction for each other, with a cohesive energy of 7.37 eV. In the diamond structure, each carbon atom is covalently bonded to four other carbon atoms located at four corners of a cube as shown in Figure 43.13a.


The crystalline structure of diamond is shown in Figure 43.13b. Notice that each carbon atom forms covalent bonds with four nearest-neighbor atoms. The basic structure of diamond is called tetrahedral (each carbon atom is at the center of a regular tetrahedron), and the angle between the bonds is 109.5° . Other crystals such as silicon and germanium have the same structure.

Carbon is interesting in that it can form several different types of structures. In addition to the diamond structure, it forms graphite, with completely different properties. In this form, the carbon atoms form flat layers with hexagonal arrays of atoms. A very weak interaction between the layers allows the layers to be removed easily under friction, as occurs in the graphite used in pencil lead.

Carbon atoms can also form a large hollow structure; in this case, the compound is called **buckminsterfullerene** after the famous architect R. Buckminster Fuller, who invented the geodesic dome. The unique shape of this molecule (Fig. 43.14) provides a “cage” to hold other atoms or molecules. Related structures, called “buckytubes” because of their long, narrow cylindrical arrangements of carbon atoms, may provide the basis for extremely strong, yet lightweight, materials.

A current area of active research is in the properties and applications of **graphene**. Graphene consists of a monolayer of carbon atoms, with the atoms arranged in hexagons so that the monolayer looks like chicken wire. Graphite flakes that are shed from a pencil while writing contain small fragments of graphene. Pioneers in graphene research include Andre Geim (b. 1958) and Konstantin Novoselov (b. 1974) of the University of Manchester, who received the Nobel Prize in Physics in 2010 for their experiments. Graphene has interesting electronic, thermal, and optical properties that are currently under investigation. Its mechanical properties include a breaking strength 200 times that of steel. Potential applications under

Figure 43.14 Computer rendering of a “buckyball,” short for the molecule buckminsterfullerene. These nearly spherical molecular structures that look like soccer balls were named for the inventor of the geodesic dome. This form of carbon, C_{60} , was discovered by astrophysicists investigating the carbon gas that exists between stars. Scientists are actively studying the properties and potential uses of buckminsterfullerene and related molecules.



© Cengage Learning/Charles D. Winters

Table 43.1 Atomic Cohesive Energies of Some Covalent Solids

Solid	Cohesive Energy (eV per ion pair)
C (diamond)	7.37
Si	4.63
Ge	3.85
InAs	5.70
SiC	6.15
ZnS	6.32
CuCl	9.24

study include graphene nanoribbons, quantum dots, transistors, optical modulators, and integrated circuits.

The atomic cohesive energies of some covalent solids are given in Table 43.1. The large energies account for the hardness of covalent solids. Diamond is particularly hard and has an extremely high melting point (about 4 000 K). Covalently bonded solids usually have high bond energies and high melting points, and are good electrical insulators.

Metallic Solids

Metallic bonds are generally weaker than ionic or covalent bonds. The outer electrons in the atoms of a metal are relatively free to move throughout the material, and the number of such mobile electrons in a metal is large. The metallic structure can be viewed as a “sea” or a “gas” of nearly free electrons surrounding a lattice of positive ions (Fig. 43.15). The bonding mechanism in a metal is the attractive force between the entire collection of positive ions and the electron gas. Metals have a cohesive energy in the range of 1 to 3 eV per atom, which is less than the cohesive energies of ionic or covalent solids.

Light interacts strongly with the free electrons in metals. Hence, visible light is absorbed and re-emitted quite close to the surface of a metal, which accounts for the shiny nature of metal surfaces. In addition to the high electrical conductivity of metals produced by the free electrons, the nondirectional nature of the metallic bond allows many different types of metal atoms to be dissolved in a host metal in varying amounts. The resulting *solid solutions*, or *alloys* (steel, bronze, brass, etc.), may be designed to have particular properties, such as tensile strength, ductility, electrical and thermal conductivity, and resistance to corrosion.

Because the bonding in metals is between all the electrons and all the positive ions, metals tend to bend when stressed. This bending is in contrast to nonmetallic solids, which tend to fracture when stressed. Fracturing results because bonding in nonmetallic solids is primarily with nearest-neighbor ions or atoms. When the distortion causes sufficient stress between some set of nearest neighbors, fracture occurs.

43.4 Free-Electron Theory of Metals

In Section 27.3, we described a classical free-electron theory of electrical conduction in metals, a structural model that led to Ohm’s law. According to this theory, a metal is modeled as a classical gas of conduction electrons moving through a fixed lattice of ions. Although this theory predicts the correct functional form of Ohm’s law, it does not predict the correct values of electrical and thermal conductivities.

A quantum-based free-electron theory of metals remedies the shortcomings of the classical model by taking into account the wave nature of the electrons. In this model, based on the quantum particle under boundary conditions analysis model, the outer-shell electrons are free to move through the metal but are trapped within

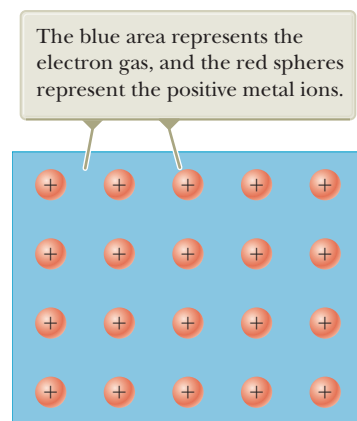


Figure 43.15 Highly schematic diagram of a metal.

a three-dimensional box formed by the metal surfaces. Therefore, each electron is represented as a particle in a box. As discussed in Section 41.2, particles in a box are restricted to quantized energy levels.

Statistical physics can be applied to a collection of particles in an effort to relate microscopic properties to macroscopic properties as we saw with kinetic theory of gases in Chapter 21. In the case of electrons, it is necessary to use *quantum statistics*, with the requirement that each state of the system can be occupied by only two electrons (one with spin up and the other with spin down) as a consequence of the exclusion principle. The probability that a particular state having energy E is occupied by one of the electrons in a solid is

Fermi–Dirac distribution
function

$$f(E) = \frac{1}{e^{(E-E_F)/k_B T} + 1} \quad (43.19)$$

where $f(E)$ is called the **Fermi–Dirac distribution function** and E_F is called the **Fermi energy**. A plot of $f(E)$ versus E at $T = 0$ K is shown in Figure 43.16a. Notice that $f(E) = 1$ for $E < E_F$ and $f(E) = 0$ for $E > E_F$. That is, at 0 K, all states having energies less than the Fermi energy are occupied and all states having energies greater than the Fermi energy are vacant. A plot of $f(E)$ versus E at some temperature $T > 0$ K is shown in Figure 43.16b. This curve shows that as T increases, the distribution rounds off slightly. Because of thermal excitation, states near and below E_F lose population and states near and above E_F gain population. The Fermi energy E_F also depends on temperature, but the dependence is weak in metals.

Let's now follow up on our discussion of the particle in a box in Chapter 41 to generalize the results to a three-dimensional box. Recall that if a particle of mass m is confined to move in a one-dimensional box of length L , the allowed states have quantized energy levels given by Equation 41.14:

$$E_n = \left(\frac{h^2}{8mL^2} \right) n^2 = \left(\frac{\hbar^2 \pi^2}{2mL^2} \right) n^2 \quad n = 1, 2, 3, \dots$$

Now imagine a piece of metal in the shape of a solid cube of sides L and volume L^3 and focus on one electron that is free to move anywhere in this volume. Therefore, the electron is modeled as a particle in a three-dimensional box. In this model, we require that $\psi(x, y, z) = 0$ at the boundaries of the metal. It can be shown (see Problem 37) that the energy for such an electron is

$$E = \frac{\hbar^2 \pi^2}{2m_e L^2} (n_x^2 + n_y^2 + n_z^2) \quad (43.20)$$

where m_e is the mass of the electron and n_x , n_y , and n_z are quantum numbers. As we expect, the energies are quantized, and each allowed value of the energy is characterized by this set of three quantum numbers (one for each degree of freedom) and the spin quantum number m_s . For example, the ground state, corresponding to

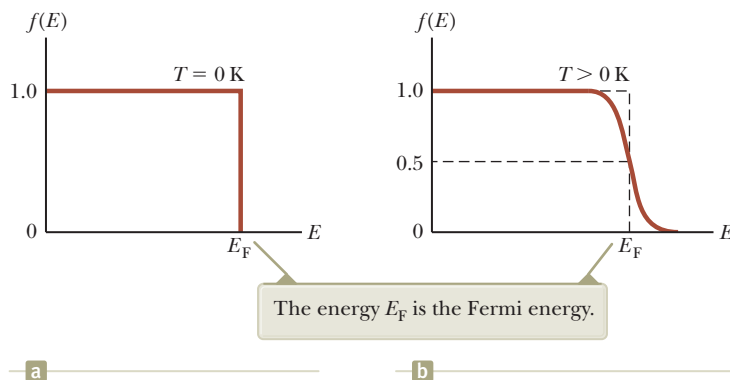


Figure 43.16 Plot of the Fermi–Dirac distribution function $f(E)$ versus energy at (a) $T = 0$ K and (b) $T > 0$ K.

$n_x = n_y = n_z = 1$, has an energy equal to $3\hbar^2\pi^2/2m_eL^2$ and can be occupied by two electrons, corresponding to spin up and spin down.

Because of the macroscopic size L of the box, the energy levels for the electrons are very close together. As a result, we can treat the quantum numbers as continuous variables. Under this assumption, the number of allowed states per unit volume that have energies between E and $E + dE$ is

$$g(E) dE = \frac{8\sqrt{2} \pi m_e^{3/2}}{h^3} E^{1/2} dE \quad (43.21)$$

(See Example 43.5.) The function $g(E)$ is called the **density-of-states function**.

If a metal is in thermal equilibrium, the number of electrons per unit volume $N(E) dE$ that have energy between E and $E + dE$ is equal to the product of the number of allowed states per unit volume and the probability that a state is occupied; that is, $N(E) dE = g(E)f(E) dE$:

$$N(E) dE = \left(\frac{8\sqrt{2} \pi m_e^{3/2}}{h^3} E^{1/2} \right) \left(\frac{1}{e^{(E-E_F)/k_B T} + 1} \right) dE \quad (43.22)$$

Plots of $N(E)$ versus E for two temperatures are given in Figure 43.17.

If n_e is the total number of electrons per unit volume, we require that

$$n_e = \int_0^\infty N(E) dE = \frac{8\sqrt{2} \pi m_e^{3/2}}{h^3} \int_0^\infty \frac{E^{1/2} dE}{e^{(E-E_F)/k_B T} + 1} \quad (43.23)$$

We can use this condition to calculate the Fermi energy. At $T = 0$ K, the Fermi-Dirac distribution function $f(E) = 1$ for $E < E_F$ and $f(E) = 0$ for $E > E_F$. Therefore, at $T = 0$ K, Equation 43.23 becomes

$$n_e = \frac{8\sqrt{2} \pi m_e^{3/2}}{h^3} \int_0^{E_F} E^{1/2} dE = \frac{2}{3} \frac{8\sqrt{2} \pi m_e^{3/2}}{h^3} E_F^{3/2} \quad (43.24)$$

Solving for the Fermi energy at 0 K gives

$$E_F(0) = \frac{h^2}{2m_e} \left(\frac{3n_e}{8\pi} \right)^{2/3} \quad (43.25)$$

The Fermi energies for metals are in the range of a few electron volts. Representative values for various metals are given in Table 43.2. It is left as a problem (Problem 39) to show that the average energy of a free electron in a metal at 0 K is

$$E_{\text{avg}} = \frac{3}{5} E_F \quad (43.26)$$

In summary, we can consider a metal to be a system comprising a very large number of energy levels available to the free electrons. These electrons fill the levels in accordance with the Pauli exclusion principle, beginning with $E = 0$ and ending with E_F . At $T = 0$ K, all levels below the Fermi energy are filled and all levels above the Fermi energy are empty. At 300 K, a small fraction of the free electrons are excited above the Fermi energy.

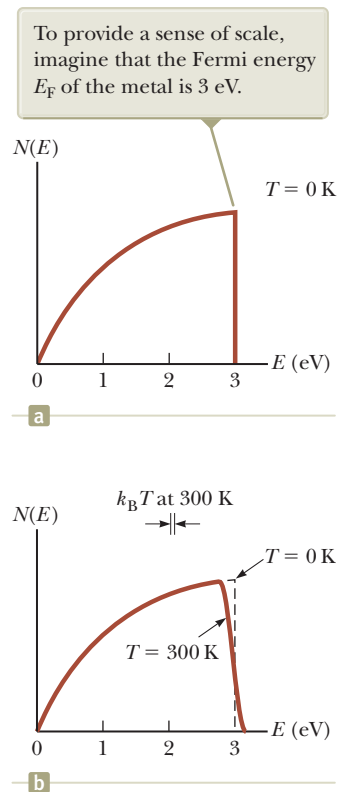


Figure 43.17 Plot of the electron distribution function versus energy in a metal at (a) $T = 0$ K and (b) $T = 300$ K.

◀ Fermi energy at $T = 0$ K

Table 43.2 Calculated Values of the Fermi Energy for Metals at 300 K Based on the Free-Electron Theory

Metal	Electron Concentration (m^{-3})	Fermi Energy (eV)
Li	4.70×10^{28}	4.72
Na	2.65×10^{28}	3.23
K	1.40×10^{28}	2.12
Cu	8.46×10^{28}	7.05
Ag	5.85×10^{28}	5.48
Au	5.90×10^{28}	5.53

Example 43.4 The Fermi Energy of Gold

Each atom of gold (Au) contributes one free electron to the metal. Compute the Fermi energy for gold.

SOLUTION

Conceptualize Imagine electrons filling available levels at $T = 0$ K in gold until the solid is neutral. The highest energy filled is the Fermi energy.

Categorize We evaluate the result using a result from this section, so we categorize this example as a substitution problem.

Substitute the concentration of free electrons in gold from Table 43.2 into Equation 43.25 to calculate the Fermi energy at 0 K:

$$\begin{aligned} E_F(0) &= \frac{(6.626 \times 10^{-34} \text{ J} \cdot \text{s})^2}{2(9.11 \times 10^{-31} \text{ kg})} \left[\frac{3(5.90 \times 10^{28} \text{ m}^{-3})}{8\pi} \right]^{2/3} \\ &= 8.85 \times 10^{-19} \text{ J} = \boxed{5.53 \text{ eV}} \end{aligned}$$

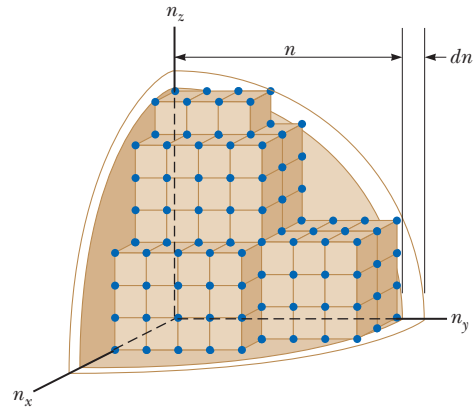
Example 43.5 Deriving Equation 43.21

Based on the allowed states of a particle in a three-dimensional box, derive Equation 43.21.

SOLUTION

Conceptualize Imagine a particle confined to a three-dimensional box, subject to boundary conditions in three dimensions. Imagine also a three-dimensional *quantum number space* whose axes represent n_x , n_y , and n_z . The allowed states in this space can be represented as dots located at integral values of the three quantum numbers as in Figure 43.18. This space is not traditional space in which a location is specified by coordinates x , y , and z ; rather, it is a space in which

Figure 43.18 The dots representing the allowed states are located at integer values of n_x , n_y , and n_z and are therefore at the corners of cubes with sides of “length” 1.



allowed states can be specified by coordinates representing the quantum numbers. The number of allowed states having energies between E and $E + dE$ corresponds to the number of dots in the spherical shell of radius n and thickness dn .

Categorize We categorize this problem as that of a quantum system in which the energies of the particle are quantized. Furthermore, we can base the solution to the problem on our understanding of the particle in a one-dimensional box.

Analyze As noted previously, the allowed states of the particle in a three-dimensional box are described by three quantum numbers n_x , n_y , and n_z . For a macroscopic sample of metal, the number of allowed values of these quantum numbers is tremendous, so on a macroscopic scale, the allowed states in the number space can be modeled as continuous.

Defining $E_0 = \hbar^2 \pi^2 / 2m_e L^2$ and $n = (E/E_0)^{1/2}$, rewrite Equation 43.20:

$$(1) \quad n_x^2 + n_y^2 + n_z^2 = \frac{2m_e L^2}{\hbar^2 \pi^2} E = \frac{E}{E_0} = n^2$$

In the quantum number space, Equation (1) is the equation of a sphere of radius n . Therefore, the number of allowed states having energies between E and $E + dE$ is equal to the number of points in a spherical shell of radius n and thickness dn .

Find the “volume” of this shell, which represents the total number of states $G(E) dE$:

$$(2) \quad G(E) dE = \frac{1}{8}(4\pi n^2 dn) = \frac{1}{2}\pi n^2 dn$$

We have taken one-eighth of the total volume because we are restricted to the octant of a three-dimensional space in which all three quantum numbers are positive.

Replace n in Equation (2) with its equivalent in terms of E using the relation $n^2 = E/E_0$ from Equation (1):

$$G(E) dE = \frac{1}{2}\pi \left(\frac{E}{E_0} \right) d \left[\left(\frac{E}{E_0} \right)^{1/2} \right] = \frac{1}{2}\pi \frac{E}{(E_0)^{3/2}} d[(E)^{1/2}]$$

43.5 continued

Evaluate the differential:

$$G(E) dE = \frac{1}{2}\pi \left[\frac{E}{(E_0)^{3/2}} \right] \left(\frac{1}{2}E^{-1/2} dE \right) = \frac{1}{4}\pi E_0^{-3/2} E^{1/2} dE$$

Substitute for E_0 from its definition above:

$$\begin{aligned} G(E) dE &= \frac{1}{4}\pi \left(\frac{\hbar^2 \pi^2}{2m_e L^2} \right)^{-3/2} E^{1/2} dE \\ &= \frac{\sqrt{2}}{2} \frac{m_e^{3/2} L^3}{\hbar^3 \pi^2} E^{1/2} dE \end{aligned}$$

Letting $g(E)$ represent the number of states per unit volume, where L^3 is the volume V of the cubical box in normal space, find $g(E) = G(E)/V$:

$$g(E) dE = \frac{G(E)}{V} dE = \frac{\sqrt{2}}{2} \frac{m_e^{3/2}}{\hbar^3 \pi^2} E^{1/2} dE$$

Substitute $\hbar = h/2\pi$:

$$g(E) dE = \frac{4\sqrt{2} \pi m_e^{3/2}}{h^3} E^{1/2} dE$$

Multiply by 2 for the two possible spin states in each particle-in-a-box state:

$$g(E) dE = \frac{8\sqrt{2} \pi m_e^{3/2}}{h^3} E^{1/2} dE$$

Finalize This result is Equation 43.21, which is what we set out to derive.

43.5 Band Theory of Solids

In Section 43.4, the electrons in a metal were modeled as particles free to move around inside a three-dimensional box and we ignored the influence of the parent atoms. In this section, we make the model more sophisticated by incorporating the contribution of the parent atoms that form the crystal.

Recall from Section 41.1 that the probability density $|\psi|^2$ for a system is physically significant, but the probability amplitude ψ is not. Let's consider as an example an atom that has a single s electron outside of a closed shell. Both of the following wave functions are valid for such an atom with atomic number Z :

$$\psi_s^+(r) = +Af(r)e^{-Zr/na_0} \quad \psi_s^-(r) = -Af(r)e^{-Zr/na_0}$$

where A is the normalization constant and $f(r)$ is a function³ of r that varies with the value of n . Choosing either of these wave functions leads to the same value of $|\psi|^2$, so both choices are equivalent. A difference arises, however, when two atoms are combined.

If two identical atoms are very far apart, they do not interact and their electronic energy levels can be considered to be those of isolated atoms. Suppose the two atoms are sodium, each having a lone $3s$ electron that is in a well-defined quantum state. As the two sodium atoms are brought closer together, their wave functions begin to overlap as we discussed for covalent bonding in Section 43.1. The properties of the combined system differ depending on whether the two atoms are combined with wave functions $\psi_s^+(r)$ as in Figure 43.19a or whether they are combined with one having wave function $\psi_s^+(r)$ and the other $\psi_s^-(r)$ as in Figure 43.19b. The choice of two atoms with wave function $\psi_s^-(r)$ is physically equivalent to that with two positive wave functions, so we do not consider it separately. When two wave functions $\psi_s^+(r)$ are combined, the result is a composite wave function in which the probability amplitudes add between the atoms. If $\psi_s^+(r)$ combines with $\psi_s^-(r)$,

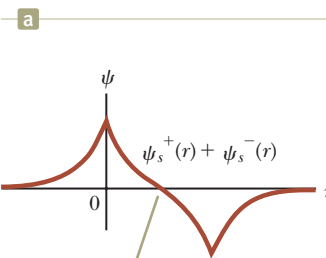
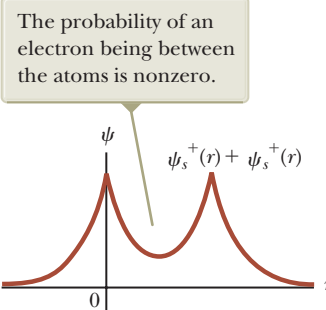
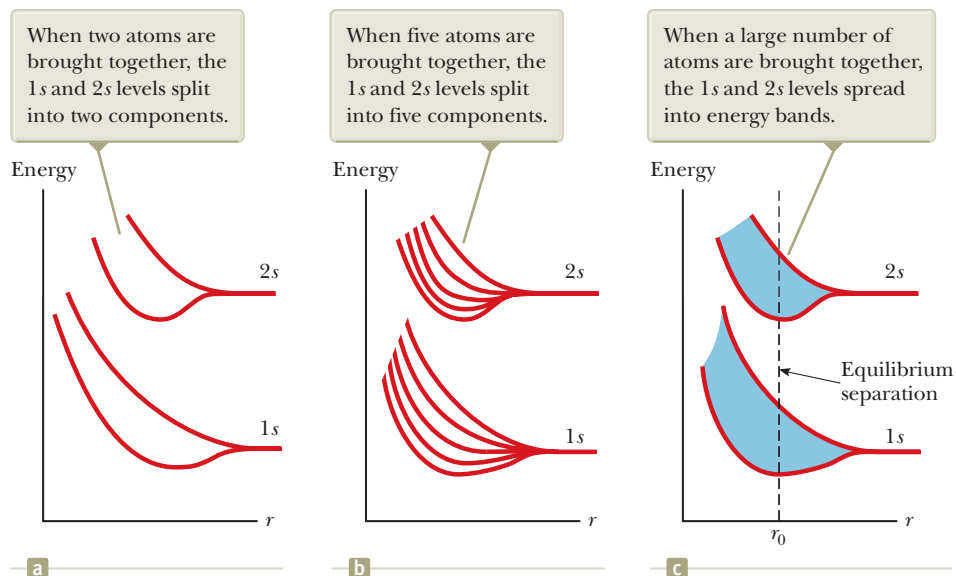


Figure 43.19 The wave functions of two atoms combine to form a composite wave function for the two-atom system when the atoms are close together. (a) Two atoms with wave functions $\psi_s^+(r)$ combine. (b) Two atoms with wave functions $\psi_s^+(r)$ and $\psi_s^-(r)$ combine.

³The functions $f(r)$ are called *Laguerre polynomials*. They can be found in the quantum treatment of the hydrogen atom in modern physics textbooks.

Figure 43.20 Energies of the 1s and 2s levels in sodium as a function of the separation distance r between atoms.



however, the wave functions between the nuclei subtract. Therefore, the composite probability amplitudes for the two possibilities are different. These two possible combinations of wave functions represent two possible states of the two-atom system. We interpret these curves as representing the probability amplitude of finding an electron. The positive–positive curve shows some probability of finding the electron at the midpoint between the atoms. The positive–negative function shows no such probability. A state with a high probability of an electron *between* two positive nuclei must have a different energy than a state with a high probability of the electron being elsewhere! Therefore, the states are *split* into two energy levels due to the two ways of combining the wave functions. The energy difference is relatively small, so the two states are close together on an energy scale.

Figure 43.20a shows this splitting effect as a function of separation distance. For large separations r , the electron clouds do not overlap and there is no splitting. As the atoms are brought closer so that r decreases, the electron clouds overlap and we need to consider the system of two atoms.

When a large number of atoms are brought together to form a solid, a similar phenomenon occurs. The individual wave functions can be brought together in various combinations of $\psi_s^+(r)$ and $\psi_s^-(r)$, each possible combination corresponding to a different energy. As the atoms are brought close together, the various isolated-atom energy levels split into multiple energy levels for the composite system. This splitting in levels for five atoms in close proximity is shown in Figure 43.20b. In this case, there are five energy levels corresponding to five different combinations of isolated-atom wave functions.

As the number of atoms grows, the number of combinations of wave functions grows, as does the number of possible energies. If we extend this argument to the large number of atoms found in solids (on the order of 10^{23} atoms per cubic centimeter), we obtain a huge number of levels of varying energy so closely spaced that they may be regarded as a continuous **band** of energy levels as shown in Figure 43.20c. In the case of sodium, it is customary to refer to the continuous distributions of allowed energy levels as *s* bands because the bands originate from the *s* levels of the individual sodium atoms.

Each energy level in the atom can spread into a band when the atoms are combined into a solid. Figure 43.21 shows the allowed energy bands of sodium at a fixed separation distance between the atoms. Notice that energy gaps, corresponding to *forbidden energies*, occur between the allowed bands. In addition, some bands exhibit sufficient spreading in energy that there is an overlap between bands arising from different quantum states ($3s$ and $3p$).

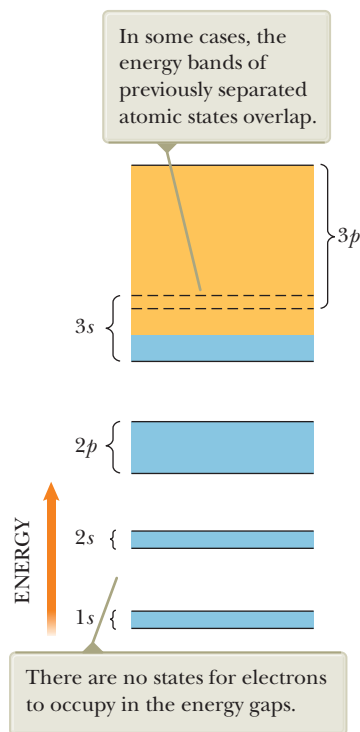


Figure 43.21 Energy bands of a sodium crystal. Blue represents energy bands occupied by the sodium electrons when the atom is in its ground state. Gold represents energy bands that are empty.

As indicated by the blue-shaded areas in Figure 43.21, the $1s$, $2s$, and $2p$ bands of sodium are each full of electrons because the $1s$, $2s$, and $2p$ states of each atom are full. An energy level in which the orbital angular momentum is ℓ can hold $2(2\ell + 1)$ electrons. The factor 2 arises from the two possible electron spin orientations, and the factor $2\ell + 1$ corresponds to the number of possible orientations of the orbital angular momentum. The capacity of each band for a system of N atoms is $2(2\ell + 1)N$ electrons. Therefore, the $1s$ and $2s$ bands each contain $2N$ electrons ($\ell = 0$), and the $2p$ band contains $6N$ electrons ($\ell = 1$). Because sodium has only one $3s$ electron and there are a total of N atoms in the solid, the $3s$ band contains only N electrons and is partially full as indicated by the blue coloring in Figure 43.21. The $3p$ band, which is the higher region of the overlapping bands, is completely empty (all gold in the figure).

Band theory allows us to build simple models to understand the behavior of conductors, insulators, and semiconductors as well as that of semiconductor devices, as we shall discuss in the following sections.

43.6 Electrical Conduction in Metals, Insulators, and Semiconductors

Good electrical conductors contain a high density of free charge carriers, and the density of free charge carriers in insulators is nearly zero. Semiconductors, first introduced in Section 23.2, are a class of technologically important materials in which charge-carrier densities are intermediate between those of insulators and those of conductors. In this section, we discuss the mechanisms of conduction in these three classes of materials in terms of a model based on energy bands.

Metals

If a material is to be a good electrical conductor, the charge carriers in the material must be free to move in response to an applied electric field. Let's consider the electrons in a metal as the charge carriers. The motion of the electrons in response to an electric field represents an increase in energy of the system (the metal lattice and the free electrons) corresponding to the additional kinetic energy of the moving electrons. The system is described by the nonisolated system model for energy. Equation 8.2 becomes $W = \Delta K$, where the work is done on the electrons by the electric field. Therefore, when an electric field is applied to a conductor, electrons must move upward to an available higher energy state on an energy-level diagram to represent the additional kinetic energy.

Figure 43.22 shows a half-filled band in a metal at $T = 0$ K, where the blue region represents levels filled with electrons. Because electrons obey Fermi–Dirac statistics, all levels below the Fermi energy are filled with electrons and all levels above the Fermi energy are empty. The Fermi energy lies in the band at the highest filled state. At temperatures slightly greater than 0 K, some electrons are thermally excited to levels above E_F , but overall there is little change from the 0 K case. If a potential difference is applied to the metal, however, electrons having energies near the Fermi energy require only a small amount of additional energy from the applied electric field to reach nearby empty energy states above the Fermi energy. Therefore, electrons in a metal experiencing only a weak applied electric field are free to move because many empty levels are available close to the occupied energy levels. The model of metals based on band theory demonstrates that metals are excellent electrical conductors.

Insulators

Now consider the two outermost energy bands of a material in which the lower band is filled with electrons and the higher band is empty at 0 K (Fig. 43.23). The

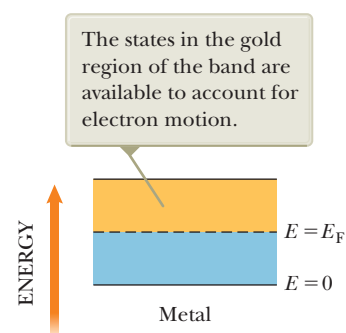


Figure 43.22 Half-filled band of a metal, an electrical conductor. At $T = 0$ K, the Fermi energy lies in the middle of the band.

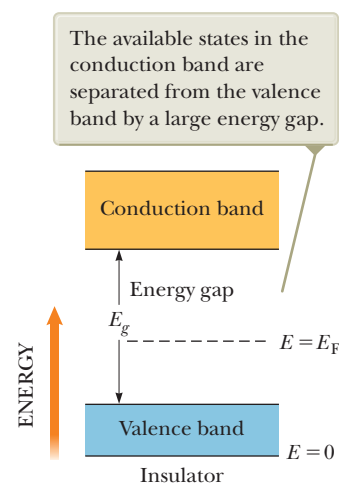


Figure 43.23 An electrical insulator at $T = 0$ K has a filled valence band and an empty conduction band. The Fermi level lies somewhere between these bands in the region known as the energy gap.

lower, filled band is called the **valence band**, and the upper, empty band is the **conduction band**. (The conduction band is the one that is partially filled in a metal.) It is common to refer to the energy separation between the valence and conduction bands as the **energy gap** E_g of the material. The Fermi energy lies somewhere in the energy gap⁴ as shown in Figure 43.23.

Suppose a material has a relatively large energy gap of, for example, approximately 5 eV. At 300 K (room temperature), $k_B T = 0.025$ eV, which is much smaller than the energy gap. At such temperatures, the Fermi–Dirac distribution predicts that very few electrons are thermally excited into the conduction band. There are no available states that lie close in energy above the valence band and into which electrons can move upward to account for the extra kinetic energy associated with motion through the material in response to an electric field. Consequently, the electrons do not move; the material is an insulator. Although an insulator has many vacant states in its conduction band that can accept electrons, these states are separated from the filled states by a large energy gap. Only a few electrons occupy these states, so the overall electrical conductivity of insulators is very small.

Table 43.3 Energy-Gap Values for Some Semiconductors

Crystal	E_g (eV)	
	0 K	300 K
Si	1.17	1.14
Ge	0.74	0.67
InP	1.42	1.34
GaP	2.32	2.26
GaAs	1.52	1.42
CdS	2.58	2.42
CdTe	1.61	1.56
ZnO	3.44	3.2
ZnS	3.91	3.6

Semiconductors

Semiconductors have the same type of band structure as an insulator, but the energy gap is much smaller, on the order of 1 eV. Table 43.3 shows the energy gaps for some representative materials. The band structure of a semiconductor is shown in Figure 43.24. Because the Fermi level is located near the middle of the gap for a semiconductor and E_g is small, appreciable numbers of electrons are thermally excited from the valence band to the conduction band. Because of the many empty levels above the thermally filled levels in the conduction band, a small applied potential difference can easily raise the electrons in the conduction band into available energy states, resulting in a moderate current.

At $T = 0$ K, all electrons in these materials are in the valence band and no energy is available to excite them across the energy gap. Therefore, semiconductors are poor conductors at very low temperatures. Because the thermal excitation of electrons across the narrow gap is more probable at higher temperatures, the conductivity of semiconductors increases rapidly with temperature, contrasting sharply with the conductivity of metals, which decreases slowly with increasing temperature.

Charge carriers in a semiconductor can be negative, positive, or both. When an electron moves from the valence band into the conduction band, it leaves behind a vacant site, called a **hole**, in the otherwise filled valence band. This hole (electron-deficient site) acts as a charge carrier in the sense that a free electron from a nearby site can transfer into the hole. Whenever an electron does so, it creates a new hole at the site it abandoned. Therefore, the net effect can be viewed as the hole migrating through the material in the direction opposite the direction of electron movement. The hole behaves as if it were a particle with a positive charge $+e$.

A pure semiconductor crystal containing only one element or one compound is called an **intrinsic semiconductor**. In these semiconductors, there are equal numbers of conduction electrons and holes. Such combinations of charges are called **electron–hole pairs**. In the presence of an external electric field, the holes move in the direction of the field and the conduction electrons move in the direction opposite the field (Fig. 43.25). Because the electrons and holes have opposite signs, both motions correspond to a current in the same direction.

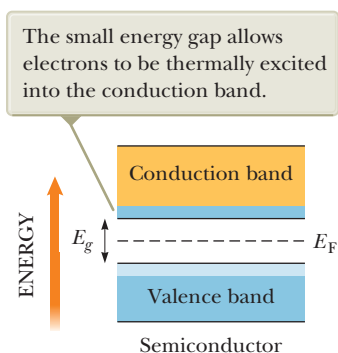


Figure 43.24 Band structure of a semiconductor at ordinary temperatures ($T \approx 300$ K). The energy gap is much smaller than in an insulator.

⁴We defined the Fermi energy as the energy of the highest filled state at $T = 0$, which might suggest that the Fermi energy should be at the top of the valence band in Figure 43.23. A more sophisticated general treatment of the Fermi energy, however, shows that it is located at that energy at which the probability of occupation is one-half (see Fig. 43.16b). According to this definition, the Fermi energy lies in the energy gap between the bands.

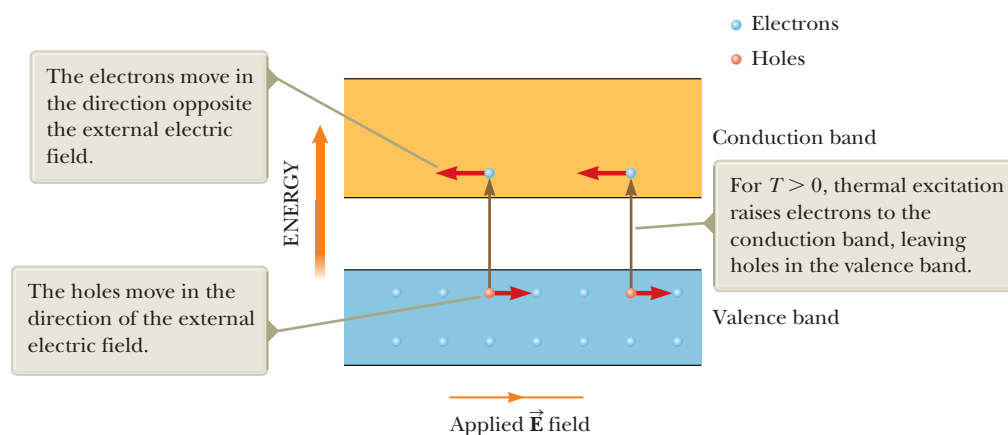


Figure 43.25 Movement of charges (holes and electrons) in an intrinsic semiconductor.

Quick Quiz 43.4 Consider the data on three materials given in the table.

Material	Conduction Band	E_g
A	Empty	1.2 eV
B	Half full	1.2 eV
C	Empty	8.0 eV

Identify each material as a conductor, an insulator, or a semiconductor.

Doped Semiconductors

When impurities are added to a semiconductor, both the band structure of the semiconductor and its resistivity are modified. The process of adding impurities, called **doping**, is important in controlling the conductivity of semiconductors. For example, when an atom containing five outer-shell electrons, such as arsenic, is added to a Group IV semiconductor, four of the electrons form covalent bonds with atoms of the semiconductor and one is left over (Fig. 43.26a). This extra electron is nearly free of its parent atom and can be modeled as having an energy level that lies in the energy gap, immediately below the conduction band (Fig. 43.26b). Such a pentavalent atom in effect donates an electron to the structure and hence is referred to as a **donor atom**. Because the spacing between the energy level of the electron of the donor atom and the bottom of the conduction band is very

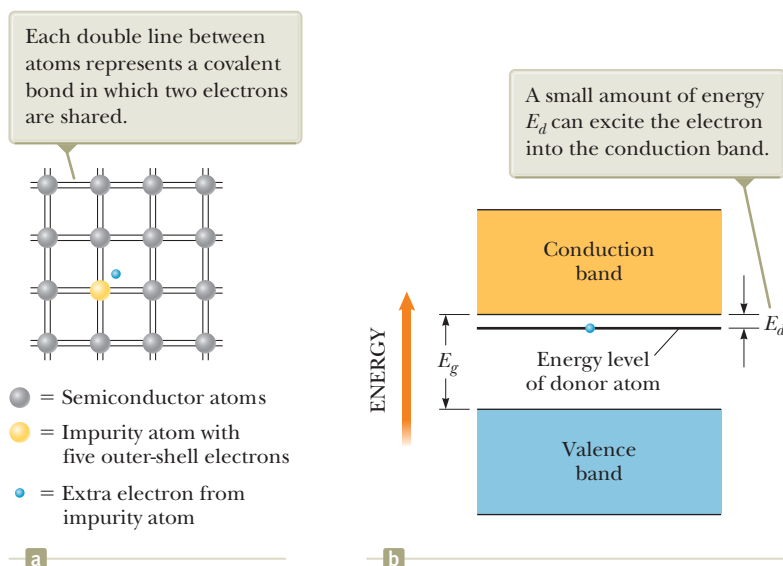
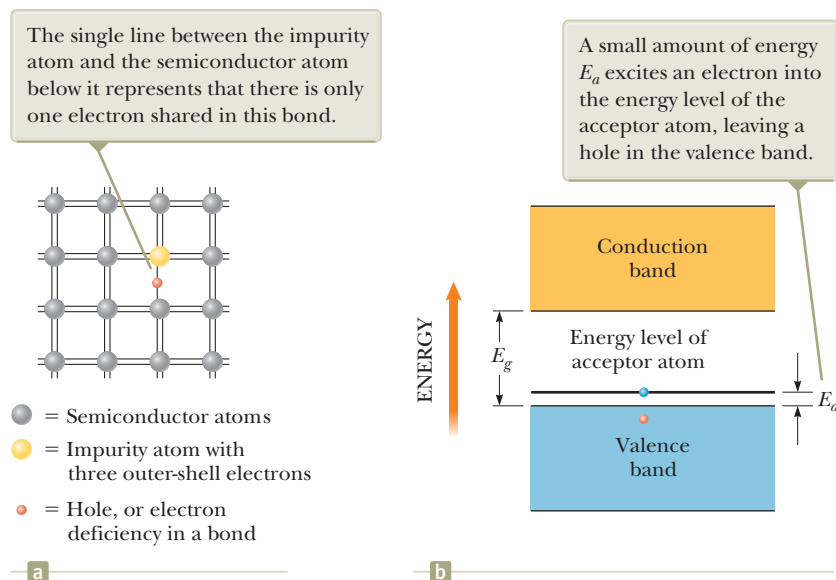


Figure 43.26 (a) Two-dimensional representation of a semiconductor consisting of Group IV atoms (gray) and an impurity atom (yellow) that has five outer-shell electrons. (b) Energy-band diagram for a semiconductor in which the nearly free electron of the impurity atom lies in the energy gap, immediately below the bottom of the conduction band.

Figure 43.27 (a) Two-dimensional representation of a semiconductor consisting of Group IV atoms (gray) and an impurity atom (yellow) having three outer-shell electrons. (b) Energy-band diagram for a semiconductor in which the energy level associated with the trivalent impurity atom lies in the energy gap, immediately above the top of the valence band.



small (typically, approximately 0.05 eV), only a small amount of thermal excitation is needed to cause this electron to move into the conduction band. (Recall that the average energy of an electron at room temperature is approximately $k_B T \approx 0.025$ eV.) Semiconductors doped with donor atoms are called ***n*-type semiconductors** because the majority of charge carriers are electrons, which are *negatively* charged.

If a Group IV semiconductor is doped with atoms containing three outer-shell electrons, such as indium and aluminum, the three electrons form covalent bonds with neighboring semiconductor atoms, leaving an electron deficiency—a hole—where the fourth bond would be if an impurity-atom electron were available to form it (Fig. 43.27a). This situation can be modeled by placing an energy level in the energy gap, immediately above the valence band, as in Figure 43.27b. An electron from the valence band has enough energy at room temperature to fill this impurity level, leaving behind a hole in the valence band. This hole can carry current in the presence of an electric field. Because a trivalent atom accepts an electron from the valence band, such impurities are referred to as **acceptor atoms**. A semiconductor doped with trivalent (acceptor) impurities is known as a ***p*-type semiconductor** because the majority of charge carriers are *positively* charged holes.

When conduction in a semiconductor is the result of acceptor or donor impurities, the material is called an **extrinsic semiconductor**. The typical range of doping densities for extrinsic semiconductors is 10^{13} to 10^{19} cm^{-3} , whereas the electron density in a typical semiconductor is roughly 10^{21} cm^{-3} .

43.7 Semiconductor Devices

The electronics of the first half of the 20th century was based on vacuum tubes, in which electrons pass through empty space between a cathode and an anode. We have seen vacuum tube devices in Figure 29.6 (the television picture tube), Figure 29.10 (circular electron beam), Figure 29.15a (Thomson's apparatus for measuring e/m_e for the electron), and Figure 40.9 (photoelectric effect apparatus).

The transistor was invented in 1948, leading to a shift away from vacuum tubes and toward semiconductors as the basis of electronic devices. This phase of electronics has been under way for several decades. As discussed in Chapter 41, there may be a new phase of electronics in the near future using nanotechnological devices employing quantum dots and other nanoscale structures.

In this section, we discuss electronic devices based on semiconductors, which are still in wide use and will be for many years to come.

The Junction Diode

A fundamental unit of a semiconductor device is formed when a p -type semiconductor is joined to an n -type semiconductor to form a p - n junction. A **junction diode** is a device that is based on a single p - n junction. The role of a diode of any type is to pass current in one direction but not the other. Therefore, it acts as a one-way valve for current.

The p - n junction shown in Figure 43.28a consists of three distinct regions: a p region, an n region, and a small area that extends several micrometers to either side of the interface, called a *depletion region*.

The depletion region may be visualized as arising when the two halves of the junction are brought together. The mobile n -side donor electrons nearest the junction (dark-blue area in Fig. 43.28a) diffuse to the p side and fill holes located there, leaving behind immobile positive ions. While this process occurs, we can model the holes that are being filled as diffusing to the n side, leaving behind a region (brown area in Fig. 43.28a) of fixed negative ions.

Because the two sides of the depletion region each carry a net charge, an internal electric field on the order of 10^4 to 10^6 V/cm exists in the depletion region (see Fig. 43.28b). This field produces an electric force on any remaining mobile charge carriers that sweeps them out of the depletion region, so named because it is a region depleted of mobile charge carriers. This internal electric field creates an internal potential difference ΔV_0 that prevents further diffusion of holes and electrons across the junction and thereby ensures zero current in the junction when no potential difference is applied.

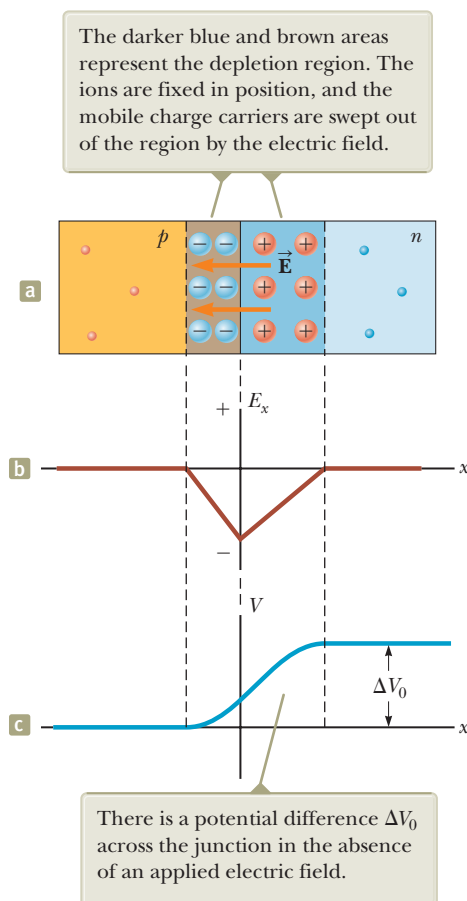
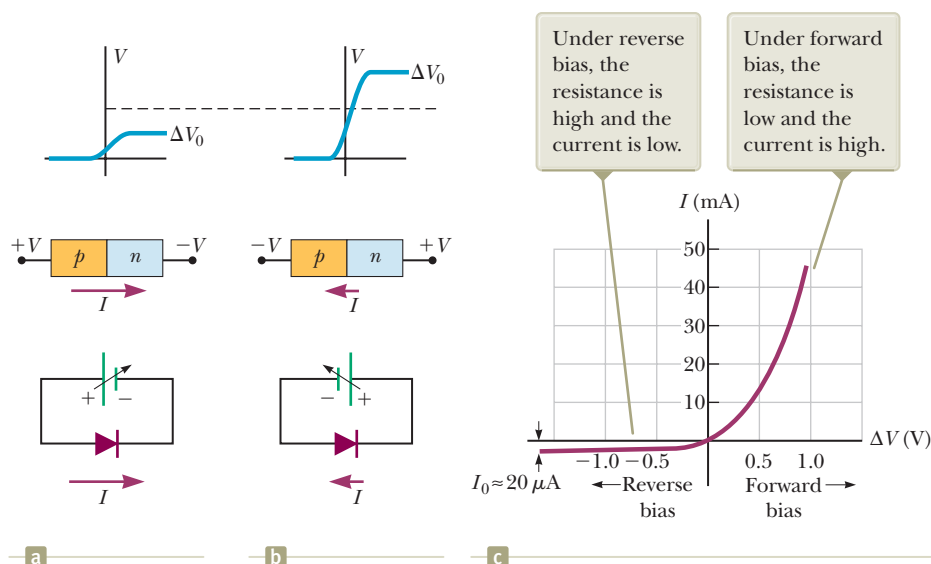


Figure 43.28 (a) Physical arrangement of a p - n junction. (b) Component E_x of the internal electric field versus x for the p - n junction. (c) Internal electric potential difference ΔV versus x for the p - n junction.

Figure 43.29 (a) A p - n junction under forward bias. The middle diagram shows the potentials applied at the ends of the junction. Below that is a circuit diagram showing a battery with an adjustable voltage. The upper diagram shows how the potential varies across the junction. The dashed line shows the potential difference across the unbiased junction. (b) When the battery is reversed and the p - n junction is under reverse bias, the current is very small. (c) The characteristic curve for a real p - n junction.



The operation of the junction as a diode is easiest to understand in terms of the potential difference graph shown in Figure 43.28c. If a voltage ΔV is applied to the junction such that the p side is connected to the positive terminal of a voltage source as shown in Figure 43.29a, the internal potential difference ΔV_0 across the junction decreases as shown at the top of the figure; the decrease results in a current that increases exponentially with increasing forward voltage, or *forward bias*. For *reverse bias* (where the n side of the junction is connected to the positive terminal of a voltage source), the internal potential difference ΔV_0 increases with increasing reverse bias as in Figure 43.29b; the increase results in a very small reverse current that quickly reaches a saturation value I_0 . The current–voltage relationship for an ideal diode is

$$I = I_0 (e^{e\Delta V/k_B T} - 1) \quad (43.27)$$

where the first e is the base of the natural logarithm, the second e represents the magnitude of the electron charge, k_B is Boltzmann's constant, and T is the absolute temperature. Figure 43.29c shows an I - ΔV plot characteristic of a real p - n junction, demonstrating the diode behavior.

Light-Emitting and Light-Absorbing Diodes

Light-emitting diodes (LEDs) and semiconductor lasers are common examples of devices that depend on the behavior of semiconductors. LEDs are used in LCD television displays, household lighting, flashlights, and camera flash units. Semiconductor lasers are often used for pointers in presentations and in playback equipment for digitally recorded information.

Light emission and absorption in semiconductors is similar to light emission and absorption by gaseous atoms except that in the discussion of semiconductors we must incorporate the concept of energy bands rather than the discrete energy levels in single atoms. As shown in Figure 43.30a, an electron excited electrically into the conduction band can easily recombine with a hole (especially if the electron is injected into a p region). As this recombination takes place, a photon of energy E_g is emitted. With proper design of the semiconductor and the associated plastic envelope or mirrors, the light from a large number of these transitions serves as the source of an LED or a semiconductor laser.

Conversely, an electron in the valence band may absorb an incoming photon of light and be promoted to the conduction band, leaving a hole behind (Fig. 43.30b). This absorbed energy can be used to operate an electrical circuit.

One device that operates on this principle is the **photovoltaic solar cell**, which appears in many handheld calculators. An early large-scale application of arrays of

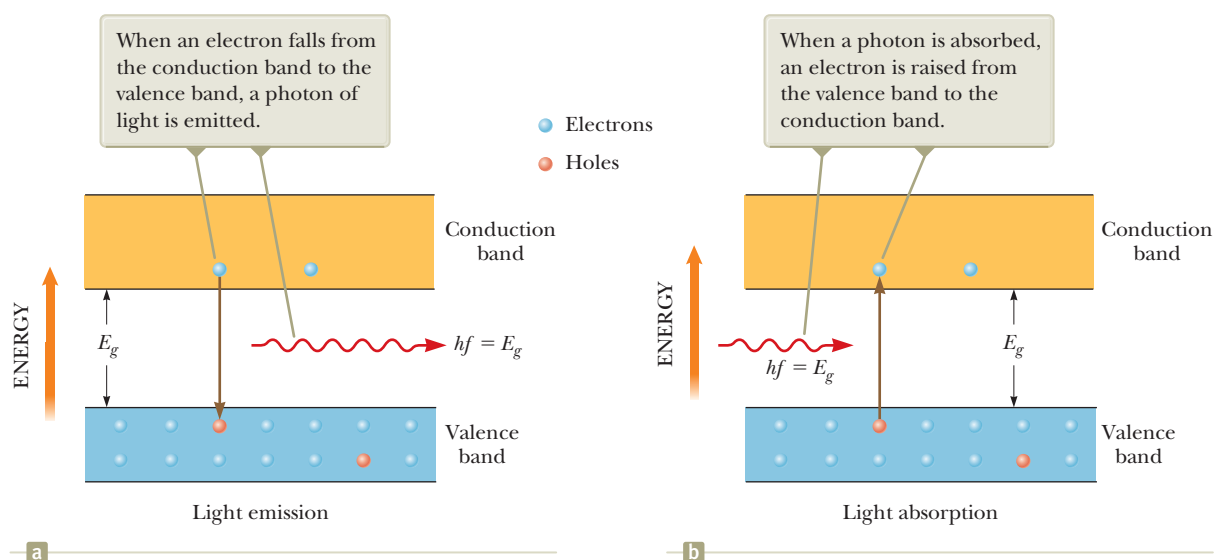


Figure 43.30 (a) Light emission from a semiconductor. (b) Light absorption by a semiconductor.

photovoltaic cells is the energy supply for orbiting spacecraft. The solar panels of the Hubble Space Telescope can be seen in the chapter-opening photograph for Chapter 38 on page 1160.

During the early years of the current century, application of photovoltaics for ground-based generation of electricity has been one of the world's fastest-growing energy technologies. At the time of this printing, the global generation of energy by means of photovoltaics is over 70 GW. A homeowner can install arrays of photovoltaic panels on the roof of his or her house and generate enough energy to operate the home as well as feed excess energy back into the electrical grid. Several photovoltaic power plants have recently been completed, including the Agua Caliente Solar Project in Arizona (200 MW completed in 2012, and 397 MW projected at completion), the Golmud Solar Park in China (200 MW), and the Charanka Solar Park in India (214 MW completed in 2012, and 500 MW projected at completion), the latter of which will be one location in the Gujarat Solar Park, a collection of several sites that is hoped to eventually supply close to 1 GW of power.

Example 43.6 Where's the Remote?

Estimate the band gap of the semiconductor in the infrared LED of a typical television remote control.

SOLUTION

Conceptualize Imagine electrons in Figure 43.30a falling from the conduction band to the valence band, emitting infrared photons in the process.

Categorize We use concepts discussed in this section, so we categorize this example as a substitution problem.

In Chapter 34, we learned that the wavelength of infrared light ranges from 700 nm to 1 mm. Let's pick a number that is easy to work with, such as 1 000 nm (which is not a bad estimate because remote controls typically operate in the range of 880 to 950 nm.)

Estimate the energy hf of the photons from the remote control:

$$E = hf = \frac{hc}{\lambda} = \frac{1\,240 \text{ eV} \cdot \text{nm}}{1\,000 \text{ nm}} = 1.2 \text{ eV}$$

This value corresponds to an energy gap E_g of approximately 1.2 eV in the LED's semiconductor.

The Transistor

The invention of the transistor by John Bardeen (1908–1991), Walter Brattain (1902–1987), and William Shockley (1910–1989) in 1948 totally revolutionized the world of electronics. For this work, these three men shared the Nobel Prize in Physics in 1956. By 1960, the transistor had replaced the vacuum tube in many electronic applications. The advent of the transistor created a multitrillion-dollar industry that produces such popular devices as personal computers, wireless keyboards, smartphones, electronic book readers, and computer tablets.

A **junction transistor** consists of a semiconducting material in which a very narrow n region is sandwiched between two p regions or a p region is sandwiched between two n regions. In either case, the transistor is formed from two p – n junctions. These types of transistors were used widely in the early days of semiconductor electronics.

During the 1960s, the electronics industry converted many electronic applications from the junction transistor to the **field-effect transistor**, which is much easier to manufacture and just as effective. Figure 43.31a shows the structure of a very common device, the **MOSFET**, or **metal-oxide-semiconductor field-effect transistor**. You are likely using millions of MOSFET devices when you are working on your computer.

There are three metal connections (the M in MOSFET) to the transistor: the *source*, *drain*, and *gate*. The source and drain are connected to n -type semiconductor regions (the S in MOSFET) at either end of the structure. These regions are connected by a narrow channel of additional n -type material, the n channel. The source and drain regions and the n channel are embedded in a p -type substrate material, which forms a depletion region, as in the junction diode, along the bottom of the n channel. (Depletion regions also exist at the junctions underneath the source and drain regions, but we will ignore them because the operation of the device depends primarily on the behavior in the channel.)

The gate is separated from the n channel by a layer of insulating silicon dioxide (the O in MOSFET, for oxide). Therefore, it does not make electrical contact with the rest of the semiconducting material.

Imagine that a voltage source ΔV_{SD} is applied across the source and drain as shown in Figure 43.31b. In this situation, electrons flow through the upper region of the n channel. Electrons cannot flow through the depletion region in the lower part of the n channel because this region is depleted of charge carriers. Now a second voltage ΔV_{SG} is applied across the source and gate as in Figure 43.31c. The positive potential on the gate electrode results in an electric field below the gate that is directed downward in the n channel (the field in “field-effect”). This electric field exerts upward forces on electrons in the region below the gate, causing them to move into the n channel. Consequently, the depletion region becomes smaller,

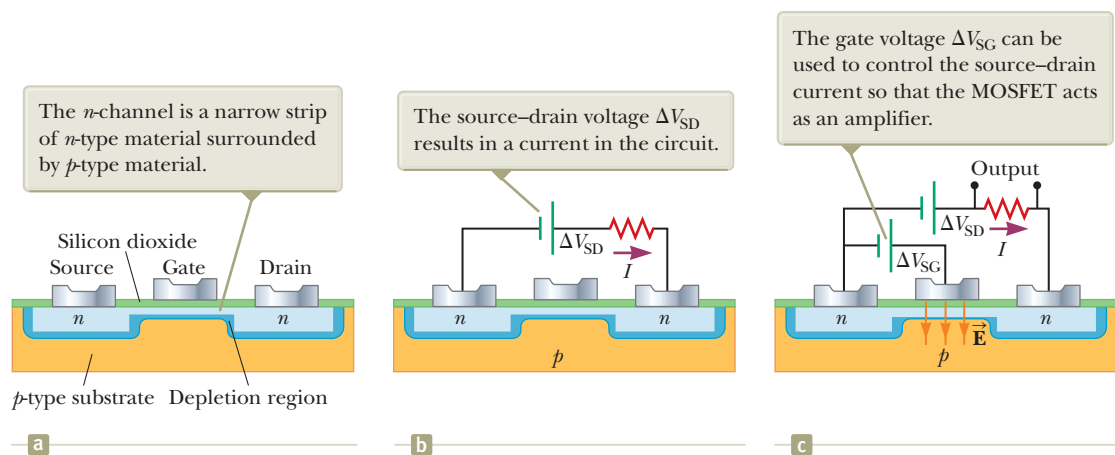


Figure 43.31 (a) The structure of a metal-oxide-semiconductor field-effect transistor (MOSFET). (b) A source–drain voltage is applied. (c) A gate voltage is applied.

widening the area through which there is current between the top of the n channel and the depletion region. As the area becomes wider, the current increases.

If a varying voltage, such as that generated from music stored in the memory of a smartphone, is applied to the gate, the area through which the source–drain current exists varies in size according to the varying gate voltage. A small variation in gate voltage results in a large variation in current and a correspondingly large voltage across the resistor in Figure 43.31c. Therefore, the MOSFET acts as a voltage amplifier. A circuit consisting of a chain of such transistors can result in a very small initial signal from a microphone being amplified enough to drive powerful speakers at an outdoor concert.

The Integrated Circuit

Invented independently by Jack Kilby (1923–2005, Nobel Prize in Physics, 2000) at Texas Instruments in late 1958 and by Robert Noyce (1927–1990) at Fairchild Camera and Instrument in early 1959, the integrated circuit has been justly called “the most remarkable technology ever to hit mankind.” Kilby’s first device is shown in Figure 43.32. Integrated circuits have indeed started a “second industrial revolution” and are found at the heart of computers, watches, cameras, automobiles, aircraft, robots, space vehicles, and all sorts of communication and switching networks.

In simplest terms, an **integrated circuit** is a collection of interconnected transistors, diodes, resistors, and capacitors fabricated on a single piece of silicon known as a *chip*. Contemporary electronic devices often contain many integrated circuits (Fig. 43.33). State-of-the-art chips easily contain several million components within a 1-cm² area, and the number of components per square inch has increased steadily since the integrated circuit was invented. The dramatic advances in chip technology can be seen by looking at microchips manufactured by Intel. The 4004 chip, introduced in 1971, contained 2 300 transistors. This number increased to 3.2 million 24 years later in 1995 with the Pentium processor. Sixteen years later, the Core i7 Sandy Bridge processor introduced in November 2011 contained 2 270 million transistors.


Integrated circuits were invented partly to solve the interconnection problem spawned by the transistor. In the era of vacuum tubes, power and size considerations of individual components set modest limits on the number of components that could be interconnected in a given circuit. With the advent of the tiny, low-power, highly reliable transistor, design limits on the number of components disappeared and were replaced by the problem of wiring together hundreds of thousands of components. The magnitude of this problem can be appreciated when we consider that second-generation computers (consisting of discrete transistors rather than integrated circuits) contained several hundred thousand components requiring more than a million joints that had to be hand-soldered and tested.

In addition to solving the interconnection problem, integrated circuits possess the advantages of miniaturization and fast response, two attributes critical for high-speed computers. Because the response time of a circuit depends on the time



Courtesy of Texas Instruments, Inc.

Figure 43.32 Jack Kilby’s first integrated circuit, tested on September 12, 1958.



Steve Allen/Brand X/Getty Images

Figure 43.33 Integrated circuits are prevalent in many electronic devices. All the flat circuit elements with black-topped surfaces in this photograph are integrated circuits.

interval required for electrical signals traveling at the speed of light to pass from one component to another, miniaturization and close packing of components result in fast response times.

43.8 Superconductivity

We learned in Section 27.5 that there is a class of metals and compounds known as **superconductors** whose electrical resistance decreases to virtually zero below a certain temperature T_c called the *critical temperature* (Table 27.3). Let's now look at these amazing materials in greater detail, using what we know about the properties of solids to help us understand the behavior of superconductors.

Let's start by examining the Meissner effect, introduced in Section 30.6 as the exclusion of magnetic flux from the interior of superconductors. The Meissner effect is illustrated in Figure 43.34 for a superconducting material in the shape of a long cylinder. Notice that the magnetic field penetrates the cylinder when its temperature is greater than T_c (Fig. 43.34a). As the temperature is lowered to below T_c , however, the field lines are spontaneously expelled from the interior of the superconductor (Fig. 43.34b). Therefore, a superconductor is more than a perfect conductor (resistivity $\rho = 0$); it is also a perfect diamagnet ($\vec{B} = 0$). The property that $\vec{B} = 0$ in the interior of a superconductor is as fundamental as the property of zero resistance. If the magnitude of the applied magnetic field exceeds a critical value B_c , defined as the value of B that destroys a material's superconducting properties, the field again penetrates the sample.

Because a superconductor is a perfect diamagnet, it repels a permanent magnet. In fact, one can perform a demonstration of the Meissner effect by floating a small permanent magnet above a superconductor and achieving magnetic levitation as seen in Figure 30.27 in Section 30.6.

Recall from our study of electricity that a good conductor expels static electric fields by moving charges to its surface. In effect, the surface charges produce an electric field that exactly cancels the externally applied field inside the conductor. In a similar manner, a superconductor expels magnetic fields by forming surface currents. To see why that happens, consider again the superconductor shown in Figure 43.34. Let's assume the sample is initially at a temperature $T > T_c$ as illustrated in Figure 43.34a so that the magnetic field penetrates the cylinder. As the cylinder is cooled to a temperature $T < T_c$, the field is expelled as shown in Figure 43.34b. Surface currents induced on the superconductor's surface produce a magnetic field that exactly cancels the externally applied field inside the superconductor. As you would expect, the surface currents disappear when the external magnetic field is removed.

A successful theory for superconductivity in metals was published in 1957 by John Bardeen, L. N. Cooper (b. 1930), and J. R. Schrieffer (b. 1931); it is generally called BCS theory, based on the first letters of their last names. This theory led to a Nobel Prize in Physics for the three scientists in 1972. In this theory, two electrons can interact via distortions in the array of lattice ions so that there is a net attractive force between the electrons.⁵ As a result, the two electrons are bound into an entity called a *Cooper pair*, which behaves like a particle with integral spin. Particles with integral spin are called *bosons*. (As noted in Pitfall Prevention 42.6, *fermions* make up another class of particles, those with half-integral spin.) An important feature of bosons is that they do not obey the Pauli exclusion principle. Consequently, at very low temperatures, it is possible for all bosons in a collection of such particles to be in the lowest quantum state. The entire collection of Cooper pairs in the metal is described by a single wave function. Above the energy level associated with this wave function is an energy gap equal to the binding energy of a Cooper pair. Under

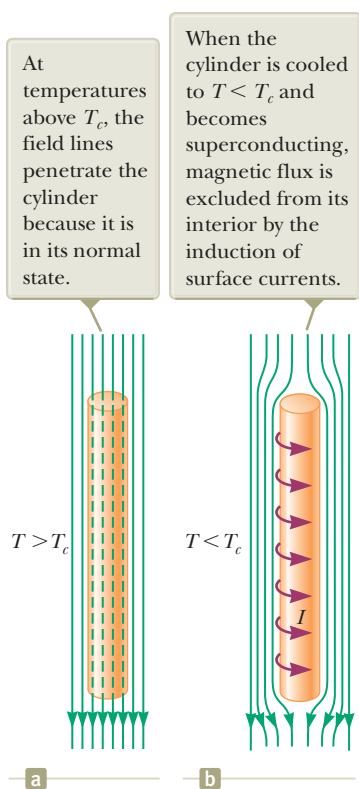


Figure 43.34 A superconductor in the form of a long cylinder in the presence of an external magnetic field.

⁵A highly simplified explanation of this attraction between electrons is as follows. The attractive Coulomb force between one electron and the surrounding positively charged lattice ions causes the ions to move inward slightly toward the electron. As a result, there is a higher concentration of positive charge in this region than elsewhere in the lattice. A second electron is attracted to the higher concentration of positive charge.

the action of an applied electric field, the Cooper pairs experience an electric force and move through the metal. A random scattering event of a Cooper pair from a lattice ion would represent resistance to the electric current. Such a collision would change the energy of the Cooper pair because some energy would be transferred to the lattice ion. There are no available energy levels below that of the Cooper pair (it is already in the lowest state), however, and none available above because of the energy gap. As a result, collisions do not occur and there is no resistance to the movement of Cooper pairs.

An important development in physics that elicited much excitement in the scientific community was the discovery of high-temperature copper oxide-based superconductors. The excitement began with a 1986 publication by J. Georg Bednorz (b. 1950) and K. Alex Müller (b. 1927), scientists at the IBM Zurich Research Laboratory in Switzerland. In their seminal paper,⁶ Bednorz and Müller reported strong evidence for superconductivity at 30 K in an oxide of barium, lanthanum, and copper. They were awarded the Nobel Prize in Physics in 1987 for their remarkable discovery. Shortly thereafter, a new family of compounds was open for investigation and research activity in the field of superconductivity proceeded vigorously. In early 1987, groups at the University of Alabama at Huntsville and the University of Houston announced superconductivity at approximately 92 K in an oxide of yttrium, barium, and copper (YBa₂Cu₃O₇). Later that year, teams of scientists from Japan and the United States reported superconductivity at 105 K in an oxide of bismuth, strontium, calcium, and copper. Superconductivity at temperatures as high as 150 K have been reported in an oxide containing mercury. In 2006, Japanese scientists discovered superconductivity for the first time in iron-based materials, beginning with LaFePO, with a critical temperature of 4 K. The highest critical temperature that has been reported so far in the iron-based materials is 55 K, a milestone held by fluorine-doped SmFeAsO. These newly discovered materials have rejuvenated the field of high- T_c superconductivity. Today, one cannot rule out the possibility of room-temperature superconductivity, and the mechanisms responsible for the behavior of high-temperature superconductors are still under investigation. The search for novel superconducting materials continues both for scientific reasons and because practical applications become more probable and widespread as the critical temperature is raised.

Although BCS theory was very successful in explaining superconductivity in metals, there is currently no widely accepted theory for high-temperature superconductivity. It remains an area of active research.

Summary

Concepts and Principles

Two or more atoms combine to form molecules because of a net attractive force between the atoms. The mechanisms responsible for molecular bonding can be classified as follows:

- **Ionic bonds** form primarily because of the Coulomb attraction between oppositely charged ions. Sodium chloride (NaCl) is one example.
- **Covalent bonds** form when the constituent atoms of a molecule share electrons. For example, the two electrons of the H₂ molecule are equally shared between the two nuclei.
- **Van der Waals bonds** are weak electrostatic bonds between molecules or between atoms that do not form ionic or covalent bonds. These bonds are responsible for the condensation of noble gas atoms and nonpolar molecules into the liquid phase.
- **Hydrogen bonds** form between the center of positive charge in a polar molecule that includes one or more hydrogen atoms and the center of negative charge in another polar molecule.

continued

⁶J. G. Bednorz and K. A. Müller, *Z. Phys. B* **64**:189, 1986.

The allowed values of the rotational energy of a diatomic molecule are

$$E_{\text{rot}} = E_J = \frac{\hbar^2}{2I} J(J+1) \quad J = 0, 1, 2, \dots \quad (43.6)$$

where I is the moment of inertia of the molecule and J is an integer called the **rotational quantum number**. The selection rule for transitions between rotational states is $\Delta J = \pm 1$.

Bonding mechanisms in solids can be classified in a manner similar to the schemes for molecules. For example, the Na^+ and Cl^- ions in NaCl form **ionic bonds**, whereas the carbon atoms in diamond form **covalent bonds**. The **metallic bond** is characterized by a net attractive force between positive ion cores and the mobile free electrons of a metal.

In a crystalline solid, the energy levels of the system form a set of **bands**. Electrons occupy the lowest energy states, with no more than one electron per state. Energy gaps are present between the bands of allowed states.

The allowed values of the vibrational energy of a diatomic molecule are

$$E_{\text{vib}} = \left(v + \frac{1}{2}\right) \frac{h}{2\pi} \sqrt{\frac{k}{\mu}} \quad v = 0, 1, 2, \dots \quad (43.10)$$

where v is the **vibrational quantum number**, k is the force constant of the “effective spring” bonding the molecule, and μ is the **reduced mass** of the molecule. The selection rule for allowed vibrational transitions is $\Delta v = \pm 1$, and the energy difference between any two adjacent levels is the same, regardless of which two levels are involved.

In the **free-electron theory of metals**, the free electrons fill the quantized levels in accordance with the Pauli exclusion principle. The number of states per unit volume available to the conduction electrons having energies between E and $E + dE$ is

$$N(E) dE = \left(\frac{8\sqrt{2} \pi m_e^{3/2}}{h^3} E^{1/2}\right) \left(\frac{1}{e^{(E-E_F)/k_B T} + 1}\right) dE \quad (43.22)$$

where E_F is the **Fermi energy**. At $T = 0$ K, all levels below E_F are filled, all levels above E_F are empty, and

$$E_F(0) = \frac{h^2}{2m_e} \left(\frac{3n_e}{8\pi}\right)^{2/3} \quad (43.25)$$

where n_e is the total number of conduction electrons per unit volume. Only those electrons having energies near E_F can contribute to the electrical conductivity of the metal.

A **semiconductor** is a material having an energy gap of approximately 1 eV and a valence band that is filled at $T = 0$ K. Because of the small energy gap, a significant number of electrons can be thermally excited from the valence band into the conduction band. The band structures and electrical properties of a Group IV semiconductor can be modified by the addition of either donor atoms containing five outer-shell electrons or acceptor atoms containing three outer-shell electrons. A semiconductor **doped** with donor impurity atoms is called an ***n*-type semiconductor**, and one doped with acceptor impurity atoms is called a ***p*-type semiconductor**.

Objective Questions

1. denotes answer available in *Student Solutions Manual/Study Guide*

- Is each one of the following statements true or false for a superconductor below its critical temperature? (a) It can carry infinite current. (b) It must carry some non-zero current. (c) Its interior electric field must be zero. (d) Its internal magnetic field must be zero. (e) No internal energy appears when it carries electric current.
- An infrared absorption spectrum of a molecule is shown in Figure OQ43.2. Notice that the highest peak on either side of the gap is the third peak from the gap. After this spectrum is taken, the temperature of the sample of molecules is raised to a much higher value. Compared with Figure OQ43.2, in this new spectrum is the highest absorption peak (a) at the same frequency, (b) farther from the gap, or (c) closer to the gap?

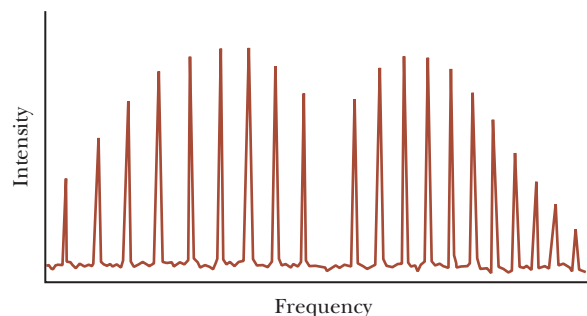


Figure OQ43.2

- What kind of bonding likely holds the atoms together in the following solids (i), (ii), and (iii)? Choose your

answers from these possibilities: (a) ionic bonding, (b) covalent bonding, and (c) metallic bonding. (i) The solid is opaque, shiny, flexible, and a good electric conductor. (ii) The crystal is transparent, brittle, and soluble in water. It is a poor conductor of electricity. (iii) The crystal is opaque, brittle, very hard, and a good electric insulator.

4. The Fermi energy for silver is 5.48 eV. In a piece of solid silver, free-electron energy levels are measured near 2 eV and near 6 eV. (i) Near which of these energies are the energy levels closer together? (a) 2 eV (b) 6 eV (c) The spacing is the same. (ii) Near which of these energies are more electrons occupying energy levels? (a) 2 eV (b) 6 eV (c) The number of electrons is the same.
5. As discussed in Chapter 27, the conductivity of metals decreases with increasing temperature due to electron collisions with vibrating atoms. In contrast, the conductivity of semiconductors increases with increasing temperature. What property of a semicon-

ductor is responsible for this behavior? (a) Atomic vibrations decrease as temperature increases. (b) The number of conduction electrons and the number of holes increase steeply with increasing temperature. (c) The energy gap decreases with increasing temperature. (d) Electrons do not collide with atoms in a semiconductor.

6. (i) Should you expect an n -type doped semiconductor to have (a) higher, (b) lower, or (c) the same conductivity as an intrinsic (pure) semiconductor? (ii) Should you expect a p -type doped semiconductor to have (a) higher, (b) lower, or (c) the same conductivity as an intrinsic (pure) semiconductor?
7. Consider a typical material composed of covalently bonded diatomic molecules. Rank the following energies from the largest in magnitude to the smallest in magnitude. (a) the latent heat of fusion per molecule (b) the molecular binding energy (c) the energy of the first excited state of molecular rotation (d) the energy of the first excited state of molecular vibration

Conceptual Questions

1. denotes answer available in *Student Solutions Manual/Study Guide*

Conceptual Questions 5 and 6 in Chapter 27 can be assigned with this chapter.

1. The energies of photons of visible light range between the approximate values 1.8 eV and 3.1 eV. Explain why silicon, with an energy gap of 1.14 eV at room temperature (see Table 43.3), appears opaque, whereas diamond, with an energy gap of 5.47 eV, appears transparent.
2. Discuss the three major forms of excitation of a molecule (other than translational motion) and the relative energies associated with these three forms.
3. How can the analysis of the rotational spectrum of a molecule lead to an estimate of the size of that molecule?
4. Pentavalent atoms such as arsenic are donor atoms in a semiconductor such as silicon, whereas trivalent atoms such as indium are acceptors. Inspect the periodic table in Appendix C and determine what other elements might make good donors or acceptors.

5. When a photon is absorbed by a semiconductor, an electron–hole pair is created. Give a physical explanation of this statement using the energy-band model as the basis for your description.
6. (a) Discuss the differences in the band structures of metals, insulators, and semiconductors. (b) How does the band-structure model enable you to understand the electrical properties of these materials better?
7. (a) What essential assumptions are made in the free-electron theory of metals? (b) How does the energy-band model differ from the free-electron theory in describing the properties of metals?
8. How do the vibrational and rotational levels of heavy hydrogen (D_2) molecules compare with those of H_2 molecules?
9. Discuss models for the different types of bonds that form stable molecules.
10. Discuss the differences between crystalline solids, amorphous solids, and gases.

Problems

ENHANCED
WebAssign The problems found in this chapter may be assigned online in Enhanced WebAssign

1. straightforward; 2. intermediate;
3. challenging

1. full solution available in the *Student Solutions Manual/Study Guide*

AMT Analysis Model tutorial available in Enhanced WebAssign

GP Guided Problem

M Master It tutorial available in Enhanced WebAssign

W Watch It video solution available in Enhanced WebAssign

Section 43.1 Molecular Bonds

1. A van der Waals dispersion force between helium atoms produces a very shallow potential well, with a depth on the order of 1 meV. At approximately what temperature would you expect helium to condense?

2. Review. A K^+ ion and a Cl^- ion are separated by a distance of 5.00×10^{-10} m. Assuming the two ions act like charged particles, determine (a) the force each ion exerts on the other and (b) the potential energy of the two-ion system in electron volts.

3. Potassium chloride is an ionically bonded molecule that is sold as a salt substitute for use in a low-sodium diet. The electron affinity of chlorine is 3.6 eV. An energy input of 0.70 eV is required to form separate K^+ and Cl^- ions from separate K and Cl atoms. What is the ionization energy of K?

4. In the potassium iodide (KI) molecule, assume the K and I atoms bond ionically by the transfer of one electron from K to I. (a) The ionization energy of K is 4.34 eV, and the electron affinity of I is 3.06 eV. What energy is needed to transfer an electron from K to I, to form K^+ and I^- ions from neutral atoms? This quantity is sometimes called the activation energy E_a . (b) A model potential energy function for the KI molecule is the Lennard–Jones potential:

$$U(r) = 4\epsilon \left[\left(\frac{\sigma}{r} \right)^{12} - \left(\frac{\sigma}{r} \right)^6 \right] + E_a$$

where r is the internuclear separation distance and ϵ and σ are adjustable parameters. The E_a term is added to ensure the correct asymptotic behavior at large r . At the equilibrium separation distance, $r = r_0 = 0.305$ nm, $U(r)$ is a minimum, and $dU/dr = 0$. In addition, $U(r_0)$ is the negative of the dissociation energy: $U(r_0) = -3.37$ eV. Find σ and ϵ . (c) Calculate the force needed to break up a KI molecule. (d) Calculate the force constant for small oscillations about $r = r_0$. *Suggestion:* Set $r = r_0 + s$, where $s/r_0 \ll 1$, and expand $U(r)$ in powers of s/r_0 up to second-order terms.

5. One description of the potential energy of a diatomic molecule is given by the Lennard–Jones potential,

$$U = \frac{A}{r^{12}} - \frac{B}{r^6}$$

where A and B are constants and r is the separation distance between the atoms. For the H_2 molecule, take $A = 0.124 \times 10^{-120}$ eV \cdot m¹² and $B = 1.488 \times 10^{-60}$ eV \cdot m⁶. Find (a) the separation distance r_0 at which the energy of the molecule is a minimum and (b) the energy E required to break up the H_2 molecule.

6. One description of the potential energy of a diatomic molecule is given by the Lennard–Jones potential,

$$U = \frac{A}{r^{12}} - \frac{B}{r^6}$$

where A and B are constants and r is the separation distance between the atoms. Find, in terms of A and B , (a) the value r_0 at which the energy is a minimum and (b) the energy E required to break up a diatomic molecule.

Section 43.2 Energy States and Spectra of Molecules

7. The CO molecule makes a transition from the $J = 1$ to the $J = 2$ rotational state when it absorbs a photon of frequency 2.30×10^{11} Hz. (a) Find the moment of inertia of this molecule from these data. (b) Compare your answer with that obtained in Example 43.1 and comment on the significance of the two results.

8. The cesium iodide (CsI) molecule has an atomic separation of 0.127 nm. (a) Determine the energy of the second excited rotational state, with $J = 2$. (b) Find the frequency of the photon absorbed in the $J = 1$ to $J = 2$ transition.

9. An HCl molecule is excited to its second rotational energy level, corresponding to $J = 2$. If the distance between its nuclei is 0.127 5 nm, what is the angular speed of the molecule about its center of mass?

10. The photon frequency that would be absorbed by the NO molecule in a transition from vibration state $v = 0$ to $v = 1$, with no change in rotation state, is 56.3 THz. The bond between the atoms has an effective spring constant of 1 530 N/m. (a) Use this information to calculate the reduced mass of the NO molecule. (b) Compute a value for μ using Equation 43.4. (c) Compare your results to parts (a) and (b) and explain their difference, if any.

11. Assume the distance between the protons in the H_2 molecule is 0.750×10^{-10} m. (a) Find the energy of the first excited rotational state, with $J = 1$. (b) Find the wavelength of radiation emitted in the transition from $J = 1$ to $J = 0$.

12. *Why is the following situation impossible?* The effective force constant of a vibrating HCl molecule is $k = 480$ N/m. A beam of infrared radiation of wavelength 6.20×10^3 nm is directed through a gas of HCl molecules. As a result, the molecules are excited from the ground vibrational state to the first excited vibrational state.

13. The effective spring constant describing the potential energy of the HI molecule is 320 N/m and that for the HF molecule is 970 N/m. Calculate the minimum amplitude of vibration for (a) the HI molecule and (b) the HF molecule.

14. The rotational spectrum of the HCl molecule contains lines with wavelengths of 0.060 4, 0.069 0, 0.080 4, 0.096 4, and 0.120 4 mm. What is the moment of inertia of the molecule?

15. The atoms of an NaCl molecule are separated by a distance $r = 0.280$ nm. Calculate (a) the reduced mass

of an NaCl molecule, (b) the moment of inertia of an NaCl molecule, and (c) the wavelength of radiation emitted when an NaCl molecule undergoes a transition from the $J = 2$ state to the $J = 1$ state.

16. A diatomic molecule consists of two atoms having masses m_1 and m_2 separated by a distance r . Show that the moment of inertia about an axis through the center of mass of the molecule is given by Equation 43.3, $I = \mu r^2$.
17. The nuclei of the O_2 molecule are separated by a distance 1.20×10^{-10} m. The mass of each oxygen atom in the molecule is 2.66×10^{-26} kg. (a) Determine the rotational energies of an oxygen molecule in electron volts for the levels corresponding to $J = 0, 1$, and 2 . (b) The effective force constant k between the atoms in the oxygen molecule is $1\,177$ N/m. Determine the vibrational energies (in electron volts) corresponding to $v = 0, 1$, and 2 .
18. Figure P43.18 is a model of a benzene molecule. All atoms lie in a plane, and the carbon atoms ($m_C = 1.99 \times 10^{-26}$ kg) form a regular hexagon, as do the hydrogen atoms ($m_H = 1.67 \times 10^{-27}$ kg). The carbon atoms are 0.110 nm apart center to center, and the adjacent carbon and hydrogen atoms are 0.100 nm apart center to center. (a) Calculate the moment of inertia of the molecule about an axis perpendicular to the plane of the paper through the center point O . (b) Determine the allowed rotational energies about this axis.

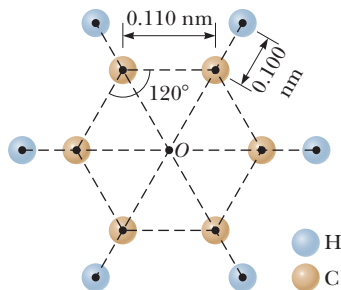


Figure P43.18

19. (a) In an HCl molecule, take the Cl atom to be the isotope ^{35}Cl . The equilibrium separation of the H and Cl atoms is $0.127\,46$ nm. The atomic mass of the H atom is $1.007\,825$ u and that of the ^{35}Cl atom is $34.968\,853$ u. Calculate the longest wavelength in the rotational spectrum of this molecule. (b) **What If?** Repeat the calculation in part (a), but take the Cl atom to be the isotope ^{37}Cl , which has atomic mass $36.965\,903$ u. The equilibrium separation distance is the same as in part (a). (c) Naturally occurring chlorine contains approximately three parts of ^{35}Cl to one part of ^{37}Cl . Because of the two different Cl masses, each line in the microwave rotational spectrum of HCl is split into a doublet as shown in Figure P43.19. Calculate the separation in wavelength between the doublet lines for the longest wavelength.

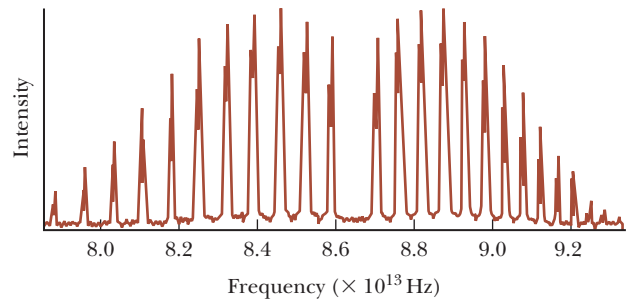


Figure P43.19 Problems 19 and 20.

20. Estimate the moment of inertia of an HCl molecule from its infrared absorption spectrum shown in Figure P43.19.
21. An H_2 molecule is in its vibrational and rotational ground states. It absorbs a photon of wavelength $2.211\,2\ \mu\text{m}$ and makes a transition to the $v = 1, J = 1$ energy level. It then drops to the $v = 0, J = 2$ energy level while emitting a photon of wavelength $2.405\,4\ \mu\text{m}$. Calculate (a) the moment of inertia of the H_2 molecule about an axis through its center of mass and perpendicular to the H-H bond, (b) the vibrational frequency of the H_2 molecule, and (c) the equilibrium separation distance for this molecule.
22. Photons of what frequencies can be spontaneously emitted by CO molecules in the state with $v = 1$ and $J = 0$?
23. Most of the mass of an atom is in its nucleus. Model the mass distribution in a diatomic molecule as two spheres of uniform density, each of radius 2.00×10^{-15} m and mass 1.00×10^{-26} kg, located at points along the y axis as in Figure 43.5a, and separated by 2.00×10^{-10} m. Rotation about the axis joining the nuclei in the diatomic molecule is ordinarily ignored because the first excited state would have an energy that is too high to access. To see why, calculate the ratio of the energy of the first excited state for rotation about the y axis to the energy of the first excited state for rotation about the x axis.

Section 43.3 Bonding in Solids

24. Use a magnifying glass to look at the grains of table salt that come out of a salt shaker. Compare what you see with Figure 43.11a. The distance between a sodium ion and a nearest-neighbor chlorine ion is 0.261 nm. (a) Make an order-of-magnitude estimate of the number N of atoms in a typical grain of salt. (b) **What If?** Suppose you had a number of grains of salt equal to this number N . What would be the volume of this quantity of salt?
25. Use Equation 43.18 to calculate the ionic cohesive energy for NaCl. Take $\alpha = 1.747\,6$, $r_0 = 0.281$ nm, and $m = 8$.
26. Consider a one-dimensional chain of alternating singly-ionized positive and negative ions. Show that the

potential energy associated with one of the ions and its interactions with the rest of this hypothetical crystal is

$$U(r) = -\alpha k_e \frac{e^2}{r}$$

where the Madelung constant is $\alpha = 2 \ln 2$ and r is the distance between ions. *Suggestion:* Use the series expansion for $\ln(1+x)$.

Section 43.4 Free-Electron Theory of Metals

Section 43.5 Band Theory of Solids

27. Calculate the energy of a conduction electron in silver at 800 K, assuming the probability of finding an electron in that state is 0.950. The Fermi energy of silver is 5.48 eV at this temperature.

28. (a) State what the Fermi energy depends on according to the free-electron theory of metals and how the Fermi energy depends on that quantity. (b) Show that Equation 43.25 can be expressed as $E_F = (3.65 \times 10^{-19}) n_e^{2/3}$, where E_F is in electron volts when n_e is in electrons per cubic meter. (c) According to Table 43.2, by what factor does the free-electron concentration in copper exceed that in potassium? (d) Which of these metals has the larger Fermi energy? (e) By what factor is the Fermi energy larger? (f) Explain whether this behavior is predicted by Equation 43.25.

29. When solid silver starts to melt, what is the approximate fraction of the conduction electrons that are thermally excited above the Fermi level?

30. (a) Find the typical speed of a conduction electron in copper, taking its kinetic energy as equal to the Fermi energy, 7.05 eV. (b) Suppose the copper is a current-carrying wire. How does the speed found in part (a) compare with a typical drift speed (see Section 27.1) of electrons in the wire of 0.1 mm/s?

31. The Fermi energy of copper at 300 K is 7.05 eV. (a) What is the average energy of a conduction electron in copper at 300 K? (b) At what temperature would the average translational energy of a molecule in an ideal gas be equal to the energy calculated in part (a)?

32. Consider a cube of gold 1.00 mm on an edge. Calculate the approximate number of conduction electrons in this cube whose energies lie in the range 4.000 to 4.025 eV.

33. Sodium is a monovalent metal having a density of 0.971 g/cm³ and a molar mass of 23.0 g/mol. Use this information to calculate (a) the density of charge carriers and (b) the Fermi energy of sodium.

34. Why is the following situation impossible? A hypothetical metal has the following properties: its Fermi energy is 5.48 eV, its density is 4.90×10^3 kg/m³, its molar mass is 100 g/mol, and it has one free electron per atom.

35. For copper at 300 K, calculate the probability that a state with an energy equal to 99.0% of the Fermi energy is occupied.

36. For a metal at temperature T , calculate the probability that a state with an energy equal to βE_F is occupied where β is a fraction between 0 and 1.

37. Review. An electron moves in a three-dimensional box of edge length L and volume L^3 . The wave function of the particle is $\psi = A \sin(k_x x) \sin(k_y y) \sin(k_z z)$. Show that its energy is given by Equation 43.20,

$$E = \frac{\hbar^2 \pi^2}{2m_e L^2} (n_x^2 + n_y^2 + n_z^2)$$

where the quantum numbers (n_x, n_y, n_z) are integers ≥ 1 . *Suggestion:* The Schrödinger equation in three dimensions may be written

$$\frac{\hbar^2}{2m} \left(\frac{\partial^2 \psi}{\partial x^2} + \frac{\partial^2 \psi}{\partial y^2} + \frac{\partial^2 \psi}{\partial z^2} \right) = (U - E)\psi$$

38. (a) Consider a system of electrons confined to a three-dimensional box. Calculate the ratio of the number of allowed energy levels at 8.50 eV to the number at 7.05 eV. (b) **What If?** Copper has a Fermi energy of 7.05 eV at 300 K. Calculate the ratio of the number of occupied levels in copper at an energy of 8.50 eV to the number at the Fermi energy. (c) How does your answer to part (b) compare with that obtained in part (a)?

39. Show that the average kinetic energy of a conduction electron in a metal at 0 K is $E_{\text{avg}} = \frac{3}{5} E_F$. *Suggestion:* In general, the average kinetic energy is

$$E_{\text{avg}} = \frac{1}{n_e} \int_0^\infty EN(E) dE$$

where n_e is the density of particles, $N(E) dE$ is given by Equation 43.22, and the integral is over all possible values of the energy.

Section 43.6 Electrical Conduction in Metals, Insulators, and Semiconductors

40. Most solar radiation has a wavelength of 1 μm or less. (a) What energy gap should the material in a solar cell have if it is to absorb this radiation? (b) Is silicon an appropriate solar cell material (see Table 43.3)? Explain your answer.

41. The energy gap for silicon at 300 K is 1.14 eV. (a) Find the lowest-frequency photon that can promote an electron from the valence band to the conduction band. (b) What is the wavelength of this photon?

42. Light from a hydrogen discharge tube is incident on a CdS crystal. (a) Which spectral lines from the Balmer series are absorbed and (b) which are transmitted?

43. A light-emitting diode (LED) made of the semiconductor GaAsP emits red light ($\lambda = 650$ nm). Determine the energy-band gap E_g for this semiconductor.

44. The longest wavelength of radiation absorbed by a certain semiconductor is 0.512 μm . Calculate the energy gap for this semiconductor.

45. You are asked to build a scientific instrument that is thermally isolated from its surroundings. The isolation

container may be a calorimeter, but these design criteria could apply to other containers as well. You wish to use a laser external to the container to raise the temperature of a target inside the instrument. You decide to use a diamond window in the container. Diamond has an energy gap of 5.47 eV. What is the shortest laser wavelength you can use to warm the sample inside the instrument?

- 46. Review.** When a phosphorus atom is substituted for a silicon atom in a crystal, four of the phosphorus valence electrons form bonds with neighboring atoms and the remaining electron is much more loosely bound. You can model the electron as free to move through the crystal lattice. The phosphorus nucleus has one more positive charge than does the silicon nucleus, however, so the extra electron provided by the phosphorus atom is attracted to this single nuclear charge $+e$. The energy levels of the extra electron are similar to those of the electron in the Bohr hydrogen atom with two important exceptions. First, the Coulomb attraction between the electron and the positive charge on the phosphorus nucleus is reduced by a factor of $1/\kappa$ from what it would be in free space (see Eq. 26.21), where κ is the dielectric constant of the crystal. As a result, the orbit radii are greatly increased over those of the hydrogen atom. Second, the influence of the periodic electric potential of the lattice causes the electron to move as if it had an effective mass m^* , which is quite different from the mass m_e of a free electron. You can use the Bohr model of hydrogen to obtain relatively accurate values for the allowed energy levels of the extra electron. We wish to find the typical energy of these donor states, which play an important role in semiconductor devices. Assume $\kappa = 11.7$ for silicon and $m^* = 0.220m_e$. (a) Find a symbolic expression for the smallest radius of the electron orbit in terms of a_0 , the Bohr radius. (b) Substitute numerical values to find the numerical value of the smallest radius. (c) Find a symbolic expression for the energy levels E_n' of the electron in the Bohr orbits around the donor atom in terms of m_e , m^* , κ , and E_n , the energy of the hydrogen atom in the Bohr model. (d) Find the numerical value of the energy for the ground state of the electron.

Section 43.7 Semiconductor Devices

- 47.** Assuming $T = 300$ K, (a) for what value of the bias voltage ΔV in Equation 43.27 does $I = 9.00I_0$? (b) **What If?** What if $I = -0.900I_0$?
- 48.** A diode, a resistor, and a battery are connected in a series circuit. The diode is at a temperature for which $k_B T = 25.0$ meV, and the saturation value of the current is $I_0 = 1.00 \mu\text{A}$. The resistance of the resistor is $R = 745 \Omega$, and the battery maintains a constant potential difference of $\mathcal{E} = 2.42$ V between its terminals. (a) Use Kirchhoff's loop rule to show that

$$\mathcal{E} - \Delta V = I_0 R (e^{e\Delta V/k_B T} - 1)$$

where ΔV is the voltage across the diode. (b) To solve this transcendental equation for the voltage ΔV , graph

the left-hand side of the above equation and the right-hand side as functions of ΔV and find the value of ΔV at which the curves cross. (c) Find the current I in the circuit. (d) Find the ohmic resistance of the diode, defined as the ratio $\Delta V/I$, at the voltage in part (b). (e) Find the dynamic resistance of the diode, which is defined as the derivative $d(\Delta V)/dI$, at the voltage in part (b).

- 49.** You put a diode in a microelectronic circuit to protect the system in case an untrained person installs the battery backward. In the correct forward-bias situation, the current is 200 mA with a potential difference of 100 mV across the diode at room temperature (300 K). If the battery were reversed, so that the potential difference across the diode is still 100 mV but with the opposite sign, what would be the magnitude of the current in the diode?

- 50.** A diode is at room temperature so that $k_B T = 0.0250$ eV. Taking the applied voltages across the diode to be $+1.00$ V (under forward bias) and -1.00 V (under reverse bias), calculate the ratio of the forward current to the reverse current if the diode is described by Equation 43.27.

Section 43.8 Superconductivity

Problem 30 in Chapter 30 and Problems 73 through 76 in Chapter 32 can also be assigned with this section.

- 51.** A thin rod of superconducting material 2.50 cm long is placed into a 0.540-T magnetic field with its cylindrical axis along the magnetic field lines. (a) Sketch the directions of the applied field and the induced surface current. (b) Find the magnitude of the surface current on the curved surface of the rod.
- 52.** A direct and relatively simple demonstration of zero DC resistance can be carried out using the four-point probe method. The probe shown in Figure P43.52 consists of a disk of $\text{YBa}_2\text{Cu}_3\text{O}_7$ (a high- T_c superconductor) to which four wires are attached. Current is maintained through the sample by applying a DC voltage between points a and b , and it is measured with a DC ammeter. The current can be varied with the variable resistance R . The potential difference ΔV_{cd} between c and d is measured with a digital voltmeter. When the probe is immersed in liquid nitrogen, the sample quickly cools

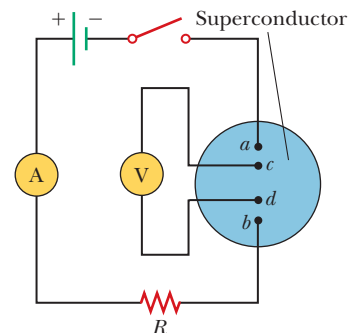


Figure P43.52

to 77 K, below the critical temperature of the material, 92 K. The current remains approximately constant, but ΔV_{cd} drops abruptly to zero. (a) Explain this observation on the basis of what you know about superconductors. (b) The data in the accompanying table represent actual values of ΔV_{cd} for different values of I taken on the sample at room temperature in the senior author's laboratory. A 6-V battery in series with a variable resistor R supplied the current. The values of R ranged from 10 Ω to 100 Ω . Make an I - ΔV plot of the data and determine whether the sample behaves in a linear manner. (c) From the data, obtain a value for the DC resistance of the sample at room temperature. (d) At room temperature, it was found that $\Delta V_{cd} = 2.234$ mV for $I = 100.3$ mA, but after the sample was cooled to 77 K, $\Delta V_{cd} = 0$ and $I = 98.1$ mA. What do you think might have caused the slight decrease in current?

Current Versus Potential Difference ΔV_{cd} Measured in a Bulk Ceramic Sample of $\text{YBa}_2\text{Cu}_3\text{O}_{7-\delta}$ at Room Temperature

I (mA)	ΔV_{cd} (mV)
57.8	1.356
61.5	1.441
68.3	1.602
76.8	1.802
87.5	2.053
102.2	2.398
123.7	2.904
155	3.61

- 53.** A superconducting ring of niobium metal 2.00 cm in diameter is immersed in a uniform 0.020 T magnetic field directed perpendicular to the ring and carries no current. Determine the current generated in the ring when the magnetic field is suddenly decreased to zero. The inductance of the ring is 3.10×10^{-8} H.

Additional Problems

- 54.** The effective spring constant associated with bonding in the N_2 molecule is 2 297 N/m. The nitrogen atoms each have a mass of 2.32×10^{-26} kg, and their nuclei are 0.120 nm apart. Assume the molecule is rigid. The first excited vibrational state of the molecule is above the vibrational ground state by an energy difference ΔE . Calculate the J value of the rotational state that is above the rotational ground state by the same energy difference ΔE .
- 55.** The hydrogen molecule comes apart (dissociates) when it is excited internally by 4.48 eV. Assuming this molecule behaves like a harmonic oscillator having classical angular frequency $\omega = 8.28 \times 10^{14}$ rad/s, find the highest vibrational quantum number for a state below the 4.48-eV dissociation energy.
- 56.** (a) Starting with Equation 43.17, show that the force exerted on an ion in an ionic solid can be written as

$$F = -\alpha k_e \frac{e^2}{r^2} \left[1 - \left(\frac{r_0}{r} \right)^{m-1} \right]$$

where α is the Madelung constant and r_0 is the equilibrium separation. (b) Imagine that an ion in the solid is displaced a small distance s from r_0 . Show that the ion experiences a restoring force $F = -Ks$, where

$$K = \frac{\alpha k_e e^2}{r_0^3} (m - 1)$$

(c) Use the result of part (b) to find the frequency of vibration of a Na^+ ion in NaCl. Take $m = 8$ and use the value $\alpha = 1.7476$.

- 57.** Under pressure, liquid helium can solidify as each atom bonds with four others, and each bond has an average energy of 1.74×10^{-23} J. Find the latent heat of fusion for helium in joules per gram. (The molar mass of He is 4.00 g/mol.)
- 58.** The dissociation energy of ground-state molecular hydrogen is 4.48 eV, but it only takes 3.96 eV to dissociate it when it starts in the first excited vibrational state with $J = 0$. Using this information, determine the depth of the H_2 molecular potential-energy function.
- 59.** Starting with Equation 43.17, show that the ionic cohesive energy of an ionically bonded solid is given by Equation 43.18.

- 60.** The Fermi-Dirac distribution function can be written as

$$f(E) = \frac{1}{e^{(E-E_F)/k_B T} + 1} = \frac{1}{e^{(E/E_F - 1)T_F/T} + 1}$$

where T_F is the Fermi temperature, defined according to

$$k_B T_F \equiv E_F$$

- (a) Write a spreadsheet to calculate and plot $f(E)$ versus E/E_F at a fixed temperature T . (b) Describe the curves obtained for $T = 0.1T_F$, $0.2T_F$, and $0.5T_F$.
- 61.** A particle moves in one-dimensional motion through a field for which the potential energy of the particle-field system is

$$U(x) = \frac{A}{x^3} - \frac{B}{x}$$

where $A = 0.150$ eV \cdot nm³ and $B = 3.68$ eV \cdot nm. The shape of this function is shown in Figure P43.61. (a) Find the equilibrium position x_0 of the particle. (b) Determine the depth U_0 of this potential well.

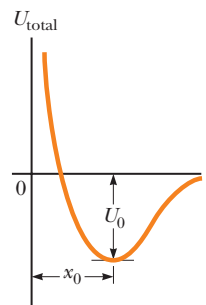


Figure P43.61 Problems 61 and 62.

(c) In moving along the x axis, what maximum force toward the negative x direction does the particle experience?

62. A particle of mass m moves in one-dimensional motion through a field for which the potential energy of the particle–field system is

$$U(x) = \frac{A}{x^3} - \frac{B}{x}$$

where A and B are constants. The general shape of this function is shown in Figure P43.61. (a) Find the equilibrium position x_0 of the particle in terms of m , A , and B . (b) Determine the depth U_0 of this potential well. (c) In moving along the x axis, what maximum force toward the negative x direction does the particle experience?

Challenge Problems

63. As you will learn in Chapter 44, carbon-14 (^{14}C) is an unstable isotope of carbon. It has the same chemical properties and electronic structure as the much more abundant isotope carbon-12 (^{12}C), but it has different nuclear properties. Its mass is 14 u, greater than that of carbon-12 because of the two extra neutrons in the

carbon-14 nucleus. Assume the CO molecular potential energy is the same for both isotopes of carbon and the examples in Section 43.2 contain accurate data and results for carbon monoxide with carbon-12 atoms. (a) What is the vibrational frequency of ^{14}CO ? (b) What is the moment of inertia of ^{14}CO ? (c) What wavelengths of light can be absorbed by ^{14}CO in the ($v = 0, J = 10$) state that cause it to end up in the $v = 1$ state?

64. As an alternative to Equation 43.1, another useful model for the potential energy of a diatomic molecule is the Morse potential

$$U(r) = B[e^{-a(r-r_0)} - 1]^2$$

where B , a , and r_0 are parameters used to adjust the shape of the potential and its depth. (a) What is the equilibrium separation of the nuclei? (b) What is the depth of the potential well, defined as the difference in energy between the potential's minimum value and its asymptote as r approaches infinity? (c) If μ is the reduced mass of the system of two nuclei and assuming the potential is nearly parabolic about the well minimum, what is the vibrational frequency of the diatomic molecule in its ground state? (d) What amount of energy needs to be supplied to the ground-state molecule to separate the two nuclei to infinity?

Nuclear Structure

- 44.1 Some Properties of Nuclei
- 44.2 Nuclear Binding Energy
- 44.3 Nuclear Models
- 44.4 Radioactivity
- 44.5 The Decay Processes
- 44.6 Natural Radioactivity
- 44.7 Nuclear Reactions
- 44.8 Nuclear Magnetic Resonance and Magnetic Resonance Imaging



Ötzi the Iceman, a Copper Age man, was discovered by German tourists in the Italian Alps in 1991 when a glacier melted enough to expose his remains. Analysis of his corpse has exposed his last meal, illnesses he suffered, and places he lived. Radioactivity was used to determine that he lived in about 3300 BC. Ötzi can be seen today in the Südtiroler Archäologiemuseum (South Tyrol Museum of Archaeology) in Bolzano, Italy. (©Vienna Report Agency/Syigma/Corbis)

The year 1896 marks the birth of nuclear physics when French physicist Antoine-Henri Becquerel (1852–1908) discovered radioactivity in uranium compounds. This discovery prompted scientists to investigate the details of radioactivity and, ultimately, the structure of the nucleus. Pioneering work by Ernest Rutherford showed that the radiation emitted from radioactive substances is of three types—alpha, beta, and gamma rays—classified according to the nature of their electric charge and their ability to penetrate matter and ionize air. Later experiments showed that alpha rays are helium nuclei, beta rays are electrons, and gamma rays are high-energy photons.

In 1911, Rutherford, Hans Geiger, and Ernest Marsden performed the alpha-particle scattering experiments described in Section 42.2. These experiments established that the nucleus of an atom can be modeled as a point mass and point charge and that most of the atomic mass is contained in the nucleus. Subsequent studies revealed the presence of a new type of force, the short-range nuclear force, which is predominant at particle separation distances less than approximately 10^{-14} m and is zero for large distances.

In this chapter, we discuss the properties and structure of the atomic nucleus. We start by describing the basic properties of nuclei, followed by a discussion of nuclear forces and binding energy, nuclear models, and the phenomenon of radioactivity. Finally, we explore the various processes by which nuclei decay and the ways that nuclei can react with each other.

44.1 Some Properties of Nuclei

All nuclei are composed of two types of particles: protons and neutrons. The only exception is the ordinary hydrogen nucleus, which is a single proton. We describe the atomic nucleus by the number of protons and neutrons it contains, using the following quantities:

- the **atomic number** Z , which equals the number of protons in the nucleus (sometimes called the *charge number*)
- the **neutron number** N , which equals the number of neutrons in the nucleus
- the **mass number** $A = Z + N$, which equals the number of **nucleons** (neutrons plus protons) in the nucleus

A **nuclide** is a specific combination of atomic number and mass number that represents a nucleus. In representing nuclides, it is convenient to use the symbol A_ZX to convey the numbers of protons and neutrons, where X represents the chemical symbol of the element. For example, ${}^{56}_{26}\text{Fe}$ (iron) has mass number 56 and atomic number 26; therefore, it contains 26 protons and 30 neutrons. When no confusion is likely to arise, we omit the subscript Z because the chemical symbol can always be used to determine Z . Therefore, ${}^{56}_{26}\text{Fe}$ is the same as ${}^{56}\text{Fe}$ and can also be expressed as “iron-56” or “Fe-56.”

The nuclei of all atoms of a particular element contain the same number of protons but often contain different numbers of neutrons. Nuclei related in this way are called **isotopes**. The isotopes of an element have the same Z value but different N and A values.

The natural abundance of isotopes can differ substantially. For example ${}^{11}_6\text{C}$, ${}^{12}_6\text{C}$, ${}^{13}_6\text{C}$, and ${}^{14}_6\text{C}$ are four isotopes of carbon. The natural abundance of the ${}^{12}_6\text{C}$ isotope is approximately 98.9%, whereas that of the ${}^{13}_6\text{C}$ isotope is only about 1.1%. Some isotopes, such as ${}^{11}_6\text{C}$ and ${}^{14}_6\text{C}$, do not occur naturally but can be produced by nuclear reactions in the laboratory or by cosmic rays.

Even the simplest element, hydrogen, has isotopes: ${}^1_1\text{H}$, the ordinary hydrogen nucleus; ${}^2_1\text{H}$, deuterium; and ${}^3_1\text{H}$, tritium.

- Quick Quiz 44.1** For each part of this Quick Quiz, choose from the following answers: (a) protons (b) neutrons (c) nucleons. **(i)** The three nuclei ${}^{12}_6\text{C}$, ${}^{13}_7\text{N}$, and ${}^{14}_8\text{O}$ have the same number of what type of particle? **(ii)** The three nuclei ${}^{12}_7\text{N}$, ${}^{13}_7\text{N}$, and ${}^{14}_7\text{N}$ have the same number of what type of particle? **(iii)** The three nuclei ${}^{14}_6\text{C}$, ${}^{14}_7\text{N}$, and ${}^{14}_8\text{O}$ have the same number of what type of particle?

Charge and Mass

The proton carries a single positive charge e , equal in magnitude to the charge $-e$ on the electron ($e = 1.6 \times 10^{-19}$ C). The neutron is electrically neutral as its name implies. Because the neutron has no charge, it was difficult to detect with early experimental apparatus and techniques. Today, neutrons are easily detected with devices such as plastic scintillators.

Nuclear masses can be measured with great precision using a mass spectrometer (see Section 29.3) and by the analysis of nuclear reactions. The proton is approximately 1 836 times as massive as the electron, and the masses of the proton and the neutron are almost equal. The **atomic mass unit** u is defined in such a way that the mass of one atom of the isotope ${}^{12}_6\text{C}$ is exactly 12 u , where 1 u is equal to $1.660\,539 \times 10^{-27}$ kg. According to this definition, the proton and neutron each have a mass of approximately 1 u and the electron has a mass that is only a small fraction of this value. The masses of these particles and others important to the phenomena discussed in this chapter are given in Table 44.1 (page 1382).

Pitfall Prevention 44.1

Mass Number Is Not Atomic Mass

The mass number A should not be confused with the atomic mass. Mass number is an integer specific to an isotope and has no units; it is simply a count of the number of nucleons. Atomic mass has units and is generally not an integer because it is an average of the masses of a given element's naturally occurring isotopes.

Table 44.1 Masses of Selected Particles in Various Units

Particle	kg	Mass u	MeV/ c^2
Proton	$1.672\,62 \times 10^{-27}$	1.007\,276	938.27
Neutron	$1.674\,93 \times 10^{-27}$	1.008\,665	939.57
Electron (β particle)	$9.109\,38 \times 10^{-31}$	$5.485\,79 \times 10^{-4}$	0.510\,999
^1_1H atom	$1.673\,53 \times 10^{-27}$	1.007\,825	938.783
^4_2He nucleus (α particle)	$6.644\,66 \times 10^{-27}$	4.001\,506	3\,727.38
^4_2He atom	$6.646\,48 \times 10^{-27}$	4.002\,603	3\,728.40
$^{12}_6\text{C}$ atom	$1.992\,65 \times 10^{-27}$	12.000\,000	11\,177.9

You might wonder how six protons and six neutrons, each having a mass larger than 1 u, can be combined with six electrons to form a carbon-12 atom having a mass of exactly 12 u. The bound system of ^{12}C has a lower rest energy (Section 39.8) than that of six separate protons and six separate neutrons. According to Equation 39.24, $E_R = mc^2$, this lower rest energy corresponds to a smaller mass for the bound system. The difference in mass accounts for the binding energy when the particles are combined to form the nucleus. We shall discuss this point in more detail in Section 44.2.

It is often convenient to express the atomic mass unit in terms of its *rest-energy equivalent*. For one atomic mass unit,

$$E_R = mc^2 = (1.660\,539 \times 10^{-27} \text{ kg})(2.997\,92 \times 10^8 \text{ m/s})^2 = 931.494 \text{ MeV}$$

where we have used the conversion $1 \text{ eV} = 1.602\,176 \times 10^{-19} \text{ J}$.

Based on the rest-energy expression in Equation 39.24, nuclear physicists often express mass in terms of the unit MeV/c^2 .

Example 44.1 The Atomic Mass Unit

Use Avogadro's number to show that $1 \text{ u} = 1.66 \times 10^{-27} \text{ kg}$.

SOLUTION

Conceptualize From the definition of the mole given in Section 19.5, we know that exactly 12 g (= 1 mol) of ^{12}C contains Avogadro's number of atoms.

Categorize We evaluate the atomic mass unit that was introduced in this section, so we categorize this example as a substitution problem.

Find the mass m of one ^{12}C atom:

$$m = \frac{0.012 \text{ kg}}{6.02 \times 10^{23} \text{ atoms}} = 1.99 \times 10^{-26} \text{ kg}$$

Because one atom of ^{12}C is defined to have a mass of 12.0 u, divide by 12.0 to find the mass equivalent to 1 u:

$$1 \text{ u} = \frac{1.99 \times 10^{-26} \text{ kg}}{12.0} = 1.66 \times 10^{-27} \text{ kg}$$

The Size and Structure of Nuclei

In Rutherford's scattering experiments, positively charged nuclei of helium atoms (alpha particles) were directed at a thin piece of metallic foil. As the alpha particles moved through the foil, they often passed near a metal nucleus. Because of the positive charge on both the incident particles and the nuclei, the particles were deflected from their straight-line paths by the Coulomb repulsive force.

Rutherford used the isolated system (energy) analysis model to find an expression for the separation distance d at which an alpha particle approaching a nucleus head-on is turned around by Coulomb repulsion. In such a head-on collision, the mechanical energy of the nucleus–alpha particle system is conserved. The initial kinetic energy of the incoming particle is transformed completely to electric potential energy of the system when the alpha particle stops momentarily at the point of closest approach (the final configuration of the system) before moving back along the same path (Fig. 44.1). Applying Equation 8.2, the conservation of energy principle, to the system gives

$$\Delta K + \Delta U = 0$$

$$\left(0 - \frac{1}{2}mv^2\right) + \left(k_e \frac{q_1 q_2}{d} - 0\right) = 0$$

where m is the mass of the alpha particle and v is its initial speed. Solving for d gives

$$d = 2k_e \frac{q_1 q_2}{mv^2} = 2k_e \frac{(2e)(Ze)}{mv^2} = 4k_e \frac{Ze^2}{mv^2}$$

where Z is the atomic number of the target nucleus. From this expression, Rutherford found that the alpha particles approached nuclei to within 3.2×10^{-14} m when the foil was made of gold. Therefore, the radius of the gold nucleus must be less than this value. From the results of his scattering experiments, Rutherford concluded that the positive charge in an atom is concentrated in a small sphere, which he called the nucleus, whose radius is no greater than approximately 10^{-14} m.

Because such small lengths are common in nuclear physics, an often-used convenient length unit is the femtometer (fm), which is sometimes called the **fermi** and is defined as

$$1 \text{ fm} \equiv 10^{-15} \text{ m}$$

In the early 1920s, it was known that the nucleus of an atom contains Z protons and has a mass nearly equivalent to that of A protons, where on average $A \approx 2Z$ for lighter nuclei ($Z \leq 20$) and $A > 2Z$ for heavier nuclei. To account for the nuclear mass, Rutherford proposed that each nucleus must also contain $A - Z$ neutral particles that he called neutrons. In 1932, British physicist James Chadwick (1891–1974) discovered the neutron, and he was awarded the Nobel Prize in Physics in 1935 for this important work.

Since the time of Rutherford's scattering experiments, a multitude of other experiments have shown that most nuclei are approximately spherical and have an average radius given by

$$r = aA^{1/3} \quad (44.1)$$

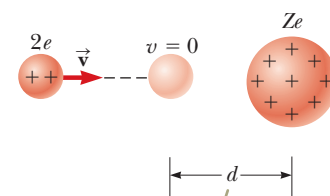
where a is a constant equal to 1.2×10^{-15} m and A is the mass number. Because the volume of a sphere is proportional to the cube of its radius, it follows from Equation 44.1 that the volume of a nucleus (assumed to be spherical) is directly proportional to A , the total number of nucleons. This proportionality suggests that *all nuclei have nearly the same density*. When nucleons combine to form a nucleus, they combine as though they were tightly packed spheres (Fig. 44.2). This fact has led to an analogy between the nucleus and a drop of liquid, in which the density of the drop is independent of its size. We shall discuss the liquid-drop model of the nucleus in Section 44.3.

Example 44.2 The Volume and Density of a Nucleus

Consider a nucleus of mass number A .

(A) Find an approximate expression for the mass of the nucleus.

continued



Because of the Coulomb repulsion between the charges of the same sign, the alpha particle approaches to a distance d from the nucleus, called the distance of closest approach.

Figure 44.1 An alpha particle on a head-on collision course with a nucleus of charge Ze .

◀ Nuclear radius

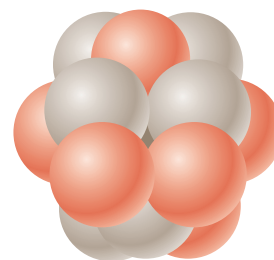


Figure 44.2 A nucleus can be modeled as a cluster of tightly packed spheres, where each sphere is a nucleon.

▶ 44.2 continued

SOLUTION

Conceptualize Imagine the nucleus to be a collection of protons and neutrons as shown in Figure 44.2. The mass number A counts *both* protons and neutrons.

Categorize Let's assume A is large enough that we can imagine the nucleus to be spherical.

Analyze The mass of the proton is approximately equal to that of the neutron. Therefore, if the mass of one of these particles is m , the mass of the nucleus is approximately Am .

(B) Find an expression for the volume of this nucleus in terms of A .

SOLUTION

Assume the nucleus is spherical and use Equation 44.1: (1) $V_{\text{nucleus}} = \frac{4}{3}\pi r^3 = \frac{4}{3}\pi a^3 A$

(C) Find a numerical value for the density of this nucleus.

SOLUTION

Use Equation 1.1 and substitute Equation (1):

$$\rho = \frac{m_{\text{nucleus}}}{V_{\text{nucleus}}} = \frac{Am}{\frac{4}{3}\pi a^3 A} = \frac{3m}{4\pi a^3}$$

Substitute numerical values:

$$\rho = \frac{3(1.67 \times 10^{-27} \text{ kg})}{4\pi(1.2 \times 10^{-15} \text{ m})^3} = 2.3 \times 10^{17} \text{ kg/m}^3$$

Finalize The nuclear density is approximately 2.3×10^{14} times the density of water ($\rho_{\text{water}} = 1.0 \times 10^3 \text{ kg/m}^3$).

WHAT IF? What if the Earth could be compressed until it had this density? How large would it be?

Answer Because this density is so large, we predict that an Earth of this density would be very small.

Use Equation 1.1 and the mass of the Earth to find the volume of the compressed Earth:

$$V = \frac{M_E}{\rho} = \frac{5.97 \times 10^{24} \text{ kg}}{2.3 \times 10^{17} \text{ kg/m}^3} = 2.6 \times 10^7 \text{ m}^3$$

From this volume, find the radius:

$$V = \frac{4}{3}\pi r^3 \rightarrow r = \left(\frac{3V}{4\pi}\right)^{1/3} = \left[\frac{3(2.6 \times 10^7 \text{ m}^3)}{4\pi}\right]^{1/3}$$

$$r = 1.8 \times 10^2 \text{ m}$$

An Earth of this radius is indeed a small Earth!

Nuclear Stability

You might expect that the very large repulsive Coulomb forces between the close-packed protons in a nucleus should cause the nucleus to fly apart. Because that does not happen, there must be a counteracting attractive force. The **nuclear force** is a very short range (about 2 fm) attractive force that acts between all nuclear particles. The protons attract each other by means of the nuclear force, and, at the same time, they repel each other through the Coulomb force. The nuclear force also acts between pairs of neutrons and between neutrons and protons. The nuclear force dominates the Coulomb repulsive force within the nucleus (at short ranges), so stable nuclei can exist.

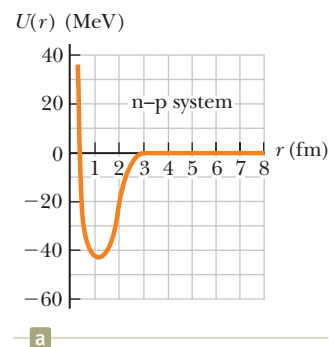
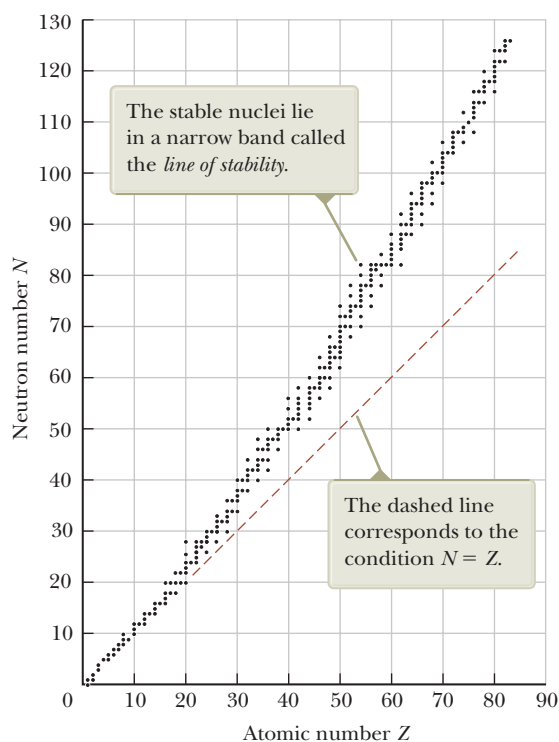
The nuclear force is independent of charge. In other words, the forces associated with the proton–proton, proton–neutron, and neutron–neutron interactions

are the same, apart from the additional repulsive Coulomb force for the proton–proton interaction.

Evidence for the limited range of nuclear forces comes from scattering experiments and from studies of nuclear binding energies. The short range of the nuclear force is shown in the neutron–proton (n–p) potential energy plot of Figure 44.3a obtained by scattering neutrons from a target containing hydrogen. The depth of the n–p potential energy well is 40 to 50 MeV, and there is a strong repulsive component that prevents the nucleons from approaching much closer than 0.4 fm.

The nuclear force does not affect electrons, enabling energetic electrons to serve as point-like probes of nuclei. The charge independence of the nuclear force also means that the main difference between the n–p and p–p interactions is that the p–p potential energy consists of a *superposition* of nuclear and Coulomb interactions as shown in Figure 44.3b. At distances less than 2 fm, both p–p and n–p potential energies are nearly identical, but for distances of 2 fm or greater, the p–p potential has a positive energy barrier with a maximum at 4 fm.

The existence of the nuclear force results in approximately 270 stable nuclei; hundreds of other nuclei have been observed, but they are unstable. A plot of neutron number N versus atomic number Z for a number of stable nuclei is given in Figure 44.4. The stable nuclei are represented by the black dots, which lie in a narrow range called the *line of stability*. Notice that the light stable nuclei contain an equal number of protons and neutrons; that is, $N = Z$. Also notice that in heavy stable nuclei, the number of neutrons exceeds the number of protons: above $Z = 20$, the line of stability deviates upward from the line representing $N = Z$. This deviation can be understood by recognizing that as the number of protons increases, the strength of the Coulomb force increases, which tends to break the nucleus apart. As a result, more neutrons are needed to keep the nucleus stable because neutrons experience only the attractive nuclear force. Eventually, the repulsive Coulomb forces between protons cannot be compensated by the addition of more neutrons. This point occurs at $Z = 83$, meaning that elements that contain more than 83 protons do not have stable nuclei.



The difference in the two curves is due to the large Coulomb repulsion in the case of the proton–proton interaction.

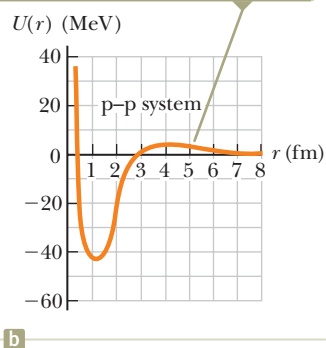


Figure 44.3 (a) Potential energy versus separation distance for a neutron–proton system. (b) Potential energy versus separation distance for a proton–proton system. To display the difference in the curves on this scale, the height of the peak for the proton–proton curve has been exaggerated by a factor of 10.

Figure 44.4 Neutron number N versus atomic number Z for stable nuclei (black dots).

44.2 Nuclear Binding Energy

As mentioned in the discussion of ^{12}C in Section 44.1, the total mass of a nucleus is less than the sum of the masses of its individual nucleons. Therefore, the rest energy of the bound system (the nucleus) is less than the combined rest energy of the separated nucleons. This difference in energy is called the **binding energy** of the nucleus and can be interpreted as the energy that must be added to a nucleus to break it apart into its components. Therefore, to separate a nucleus into protons and neutrons, energy must be delivered to the system.

Conservation of energy and the Einstein mass–energy equivalence relationship show that the binding energy E_b in MeV of any nucleus is

Binding energy of a nucleus ►

$$E_b = [ZM(\text{H}) + Nm_n - M({}_Z^AX)] \times 931.494 \text{ MeV/u} \quad (44.2)$$

where $M(\text{H})$ is the atomic mass of the neutral hydrogen atom, m_n is the mass of the neutron, $M({}_Z^AX)$ represents the atomic mass of an atom of the isotope ${}_Z^AX$, and the masses are all in atomic mass units. The mass of the Z electrons included in $M(\text{H})$ cancels with the mass of the Z electrons included in the term $M({}_Z^AX)$ within a small difference associated with the atomic binding energy of the electrons. Because atomic binding energies are typically several electron volts and nuclear binding energies are several million electron volts, this difference is negligible.

A plot of binding energy per nucleon E_b/A as a function of mass number A for various stable nuclei is shown in Figure 44.5. Notice that the binding energy in Figure 44.5 peaks in the vicinity of $A = 60$. That is, nuclei having mass numbers either greater or less than 60 are not as strongly bound as those near the middle of the periodic table. The decrease in binding energy per nucleon for $A > 60$ implies that energy is released when a heavy nucleus splits, or *fissions*, into two lighter nuclei. Energy is released in fission because the nucleons in each product nucleus are more tightly bound to one another than are the nucleons in the original nucleus. The important process of fission and a second important process of *fusion*, in which energy is released as light nuclei combine, shall be considered in detail in Chapter 45.

Pitfall Prevention 44.2

Binding Energy When separate nucleons are combined to form a nucleus, the energy of the system is reduced. Therefore, the change in energy is negative. The absolute value of this change is called the binding energy. This difference in sign may be confusing. For example, an *increase* in binding energy corresponds to a *decrease* in the energy of the system.

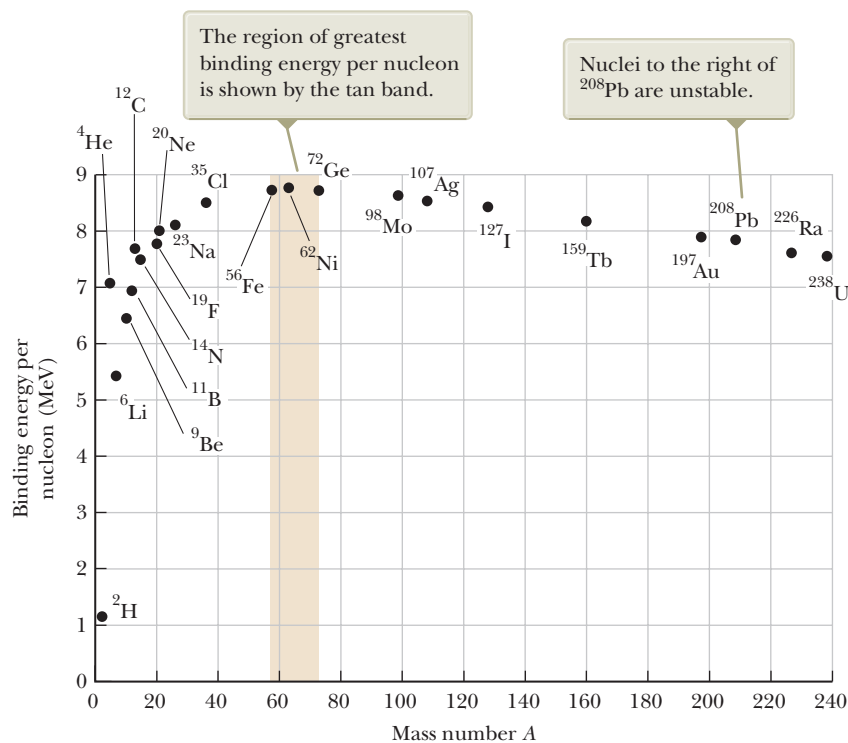


Figure 44.5 Binding energy per nucleon versus mass number for nuclides that lie along the line of stability in Figure 44.4. Some representative nuclides appear as black dots with labels.

Another important feature of Figure 44.5 is that the binding energy per nucleon is approximately constant at around 8 MeV per nucleon for all nuclei with $A > 50$. For these nuclei, the nuclear forces are said to be *saturated*, meaning that in the closely packed structure shown in Figure 44.2, a particular nucleon can form attractive bonds with only a limited number of other nucleons.

Figure 44.5 provides insight into fundamental questions about the origin of the chemical elements. In the early life of the Universe, the only elements that existed were hydrogen and helium. Clouds of cosmic gas coalesced under gravitational forces to form stars. As a star ages, it produces heavier elements from the lighter elements contained within it, beginning by fusing hydrogen atoms to form helium. This process continues as the star becomes older, generating atoms having larger and larger atomic numbers, up to the tan band shown in Figure 44.5.

The nucleus ${}_{28}^{63}\text{Ni}$ has the largest binding energy per nucleon of 8.794 5 MeV. It takes additional energy to create elements with mass numbers larger than 63 because of their lower binding energies per nucleon. This energy comes from the supernova explosion that occurs at the end of some large stars' lives. Therefore, all the heavy atoms in your body were produced from the explosions of ancient stars. You are literally made of stardust!

44.3 Nuclear Models

The details of the nuclear force are still an area of active research. Several nuclear models have been proposed that are useful in understanding general features of nuclear experimental data and the mechanisms responsible for binding energy. Two such models, the liquid-drop model and the shell model, are discussed below.

The Liquid-Drop Model

In 1936, Bohr proposed treating nucleons like molecules in a drop of liquid. In this **liquid-drop model**, the nucleons interact strongly with one another and undergo frequent collisions as they jiggle around within the nucleus. This jiggling motion is analogous to the thermally agitated motion of molecules in a drop of liquid.

Four major effects influence the binding energy of the nucleus in the liquid-drop model:

- **The volume effect.** Figure 44.5 shows that for $A > 50$, the binding energy per nucleon is approximately constant, which indicates that the nuclear force on a given nucleon is due only to a few nearest neighbors and not to all the other nucleons in the nucleus. On average, then, the binding energy associated with the nuclear force for each nucleon is the same in all nuclei: that associated with an interaction with a few neighbors. This property indicates that the total binding energy of the nucleus is proportional to A and therefore proportional to the nuclear volume. The contribution to the binding energy of the entire nucleus is C_1A , where C_1 is an adjustable constant that can be determined by fitting the prediction of the model to experimental results.
- **The surface effect.** Because nucleons on the surface of the drop have fewer neighbors than those in the interior, surface nucleons reduce the binding energy by an amount proportional to their number. Because the number of surface nucleons is proportional to the surface area $4\pi r^2$ of the nucleus (modeled as a sphere) and because $r^2 \propto A^{2/3}$ (Eq. 44.1), the surface term can be expressed as $-C_2A^{2/3}$, where C_2 is a second adjustable constant.
- **The Coulomb repulsion effect.** Each proton repels every other proton in the nucleus. The corresponding potential energy per pair of interacting protons is $k_e e^2/r$, where k_e is the Coulomb constant. The total electric potential energy is equivalent to the work required to assemble Z protons, initially infinitely far apart, into a sphere of volume V . This energy is proportional to the number

of proton pairs $Z(Z - 1)/2$ and inversely proportional to the nuclear radius. Consequently, the reduction in binding energy that results from the Coulomb effect is $-C_3Z(Z - 1)/A^{1/3}$, where C_3 is yet another adjustable constant.

- **The symmetry effect.** Another effect that lowers the binding energy is related to the symmetry of the nucleus in terms of values of N and Z . For small values of A , stable nuclei tend to have $N \approx Z$. Any large asymmetry between N and Z for light nuclei reduces the binding energy and makes the nucleus less stable. For larger A , the value of N for stable nuclei is naturally larger than Z . This effect can be described by a binding-energy term of the form $-C_4(N - Z)^2/A$, where C_4 is another adjustable constant.¹ For small A , any large asymmetry between values of N and Z makes this term relatively large and reduces the binding energy. For large A , this term is small and has little effect on the overall binding energy.

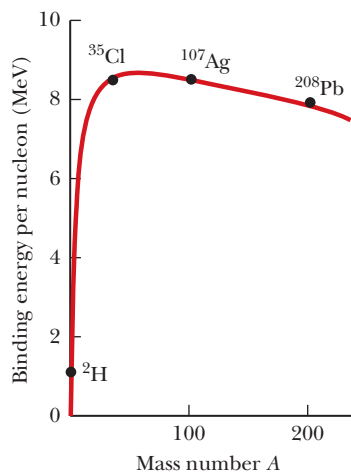


Figure 44.6 The binding-energy curve plotted by using the semiempirical binding-energy formula (red-brown). For comparison to the theoretical curve, experimental values for four sample nuclei are shown.

Adding these contributions gives the following expression for the total binding energy:

$$E_b = C_1A - C_2A^{2/3} - C_3 \frac{Z(Z - 1)}{A^{1/3}} - C_4 \frac{(N - Z)^2}{A} \quad (44.3)$$

This equation, often referred to as the **semiempirical binding-energy formula**, contains four constants that are adjusted to fit the theoretical expression to experimental data. For nuclei having $A \geq 15$, the constants have the values

$$\begin{aligned} C_1 &= 15.7 \text{ MeV} & C_2 &= 17.8 \text{ MeV} \\ C_3 &= 0.71 \text{ MeV} & C_4 &= 23.6 \text{ MeV} \end{aligned}$$

Equation 44.3, together with these constants, fits the known nuclear mass values very well as shown by the theoretical curve and sample experimental values in Figure 44.6. The liquid-drop model does not, however, account for some finer details of nuclear structure, such as stability rules and angular momentum. Equation 44.3 is a *theoretical* equation for the binding energy, based on the liquid-drop model, whereas binding energies calculated from Equation 44.2 are *experimental* values based on mass measurements.

Example 44.3 Applying the Semiempirical Binding-Energy Formula

The nucleus ^{64}Zn has a tabulated binding energy of 559.09 MeV. Use the semiempirical binding-energy formula to generate a theoretical estimate of the binding energy for this nucleus.

SOLUTION

Conceptualize Imagine bringing the separate protons and neutrons together to form a ^{64}Zn nucleus. The rest energy of the nucleus is smaller than the rest energy of the individual particles. The difference in rest energy is the binding energy.

Categorize From the text of the problem, we know to apply the liquid-drop model. This example is a substitution problem.

For the ^{64}Zn nucleus, $Z = 30$, $N = 34$, and $A = 64$. Evaluate the four terms of the semiempirical binding-energy formula:

$$\begin{aligned} C_1A &= (15.7 \text{ MeV})(64) = 1\,005 \text{ MeV} \\ C_2A^{2/3} &= (17.8 \text{ MeV})(64)^{2/3} = 285 \text{ MeV} \\ C_3 \frac{Z(Z - 1)}{A^{1/3}} &= (0.71 \text{ MeV}) \frac{(30)(29)}{(64)^{1/3}} = 154 \text{ MeV} \\ C_4 \frac{(N - Z)^2}{A} &= (23.6 \text{ MeV}) \frac{(34 - 30)^2}{64} = 5.90 \text{ MeV} \end{aligned}$$

¹The liquid-drop model *describes* that heavy nuclei have $N > Z$. The shell model, as we shall see shortly, *explains* why that is true with a physical argument.

44.3 continued

Substitute these values into Equation 44.3:

$$E_b = 1\,005 \text{ MeV} - 285 \text{ MeV} - 154 \text{ MeV} - 5.90 \text{ MeV} = 560 \text{ MeV}$$

This value differs from the tabulated value by less than 0.2%. Notice how the sizes of the terms decrease from the first to the fourth term. The fourth term is particularly small for this nucleus, which does not have an excessive number of neutrons.

The Shell Model

The liquid-drop model describes the general behavior of nuclear binding energies relatively well. When the binding energies are studied more closely, however, we find the following features:

- Most stable nuclei have an even value of A . Furthermore, only eight stable nuclei have odd values for both Z and N .
- Figure 44.7 shows a graph of the difference between the binding energy per nucleon calculated by Equation 44.3 and the measured binding energy. There is evidence for regularly spaced peaks in the data that are not described by the semiempirical binding-energy formula. The peaks occur at values of N or Z that have become known as **magic numbers**:

$$Z \text{ or } N = 2, 8, 20, 28, 50, 82 \quad (44.4)$$

◀ Magic numbers

- High-precision studies of nuclear radii show deviations from the simple expression in Equation 44.1. Graphs of experimental data show peaks in the curve of radius versus N at values of N equal to the magic numbers.
- A group of *isotones* is a collection of nuclei having the same value of N and varying values of Z . When the number of stable isotones is graphed as function of N , there are peaks in the graph, again at the magic numbers in Equation 44.4.
- Several other nuclear measurements show anomalous behavior at the magic numbers.²

These peaks in graphs of experimental data are reminiscent of the peaks in Figure 42.20 for the ionization energy of atoms, which arose because of the shell structure of the atom. The **shell model** of the nucleus, also called the **independent-particle model**, was developed independently by two German scientists: Maria Goeppert-Mayer in 1949 and Hans Jensen (1907–1973) in 1950. Goeppert-Mayer and Jensen

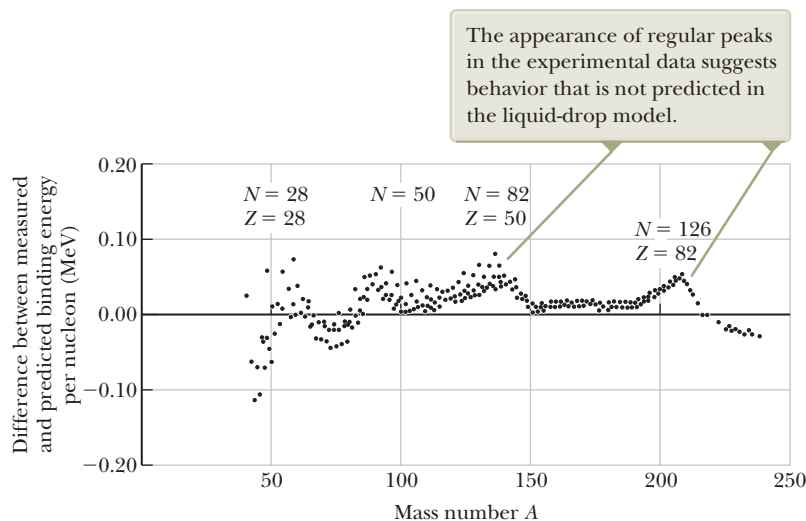


Figure 44.7 The difference between measured binding energies and those calculated from the liquid-drop model as a function of A . (Adapted from R. A. Dunlap, *The Physics of Nuclei and Particles*, Brooks/Cole, Belmont, CA, 2004.)

²For further details, see chapter 5 of R. A. Dunlap, *The Physics of Nuclei and Particles*, Brooks/Cole, Belmont, CA, 2004.



Science Source

Maria Goeppert-Mayer

German Scientist (1906–1972)

Goeppert-Mayer was born and educated in Germany. She is best known for her development of the shell model (independent-particle model) of the nucleus, published in 1950. A similar model was simultaneously developed by Hans Jensen, another German scientist. Goeppert-Mayer and Jensen were awarded the Nobel Prize in Physics in 1963 for their extraordinary work in understanding the structure of the nucleus.

The energy levels for the protons are slightly higher than those for the neutrons because of the electric potential energy associated with the system of protons.

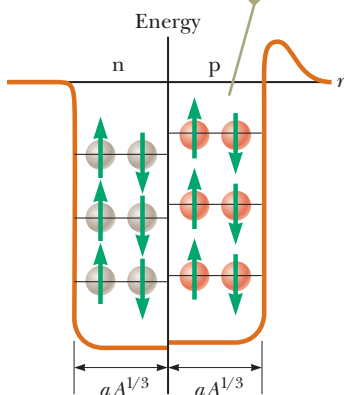


Figure 44.8 A square potential well containing 12 nucleons. The red spheres represent protons, and the gray spheres represent neutrons.

shared the 1963 Nobel Prize in Physics for their work. In this model, each nucleon is assumed to exist in a shell, similar to an atomic shell for an electron. The nucleons exist in quantized energy states, and there are few collisions between nucleons. Obviously, the assumptions of this model differ greatly from those made in the liquid-drop model.

The quantized states occupied by the nucleons can be described by a set of quantum numbers. Because both the proton and the neutron have spin $\frac{1}{2}$, the exclusion principle can be applied to describe the allowed states (as it was for electrons in Chapter 42). That is, each state can contain only two protons (or two neutrons) having *opposite* spins (Fig. 44.8). The proton states differ from those of the neutrons because the two species move in different potential wells. The proton energy levels are farther apart than the neutron levels because the protons experience a superposition of the Coulomb force and the nuclear force, whereas the neutrons experience only the nuclear force.

One factor influencing the observed characteristics of nuclear ground states is *nuclear spin-orbit* effects. The atomic spin-orbit interaction between the spin of an electron and its orbital motion in an atom gives rise to the sodium doublet discussed in Section 42.6 and is magnetic in origin. In contrast, the nuclear spin-orbit effect for nucleons is due to the nuclear force. It is much stronger than in the atomic case, and it has opposite sign. When these effects are taken into account, the shell model is able to account for the observed magic numbers.

The shell model helps us understand why nuclei containing an even number of protons and neutrons are more stable than other nuclei. (There are 160 stable even-even isotopes.) Any particular state is filled when it contains two protons (or two neutrons) having opposite spins. An extra proton or neutron can be added to the nucleus only at the expense of increasing the energy of the nucleus. This increase in energy leads to a nucleus that is less stable than the original nucleus. A careful inspection of the stable nuclei shows that the majority have a special stability when their nucleons combine in pairs, which results in a total angular momentum of zero.

The shell model also helps us understand why nuclei tend to have more neutrons than protons. As in Figure 44.8, the proton energy levels are higher than those for neutrons due to the extra energy associated with Coulomb repulsion. This effect becomes more pronounced as Z increases. Consequently, as Z increases and higher states are filled, a proton level for a given quantum number will be much higher in energy than the neutron level for the same quantum number. In fact, it will be even higher in energy than neutron levels for higher quantum numbers. Hence, it is more energetically favorable for the nucleus to form with neutrons in the lower energy levels rather than protons in the higher energy levels, so the number of neutrons is greater than the number of protons.

More sophisticated models of the nucleus have been and continue to be developed. For example, the *collective model* combines features of the liquid-drop and shell models. The development of theoretical models of the nucleus continues to be an active area of research.

44.4 Radioactivity

In 1896, Becquerel accidentally discovered that uranyl potassium sulfate crystals emit an invisible radiation that can darken a photographic plate even though the plate is covered to exclude light. After a series of experiments, he concluded that the radiation emitted by the crystals was of a new type, one that requires no external stimulation and was so penetrating that it could darken protected photographic plates and ionize gases. This process of spontaneous emission of radiation by uranium was soon to be called **radioactivity**.

Subsequent experiments by other scientists showed that other substances were more powerfully radioactive. The most significant early investigations of this type were conducted by Marie and Pierre Curie (1859–1906). After several years of care-

ful and laborious chemical separation processes on tons of pitchblende, a radioactive ore, the Curies reported the discovery of two previously unknown elements, both radioactive, named polonium and radium. Additional experiments, including Rutherford's famous work on alpha-particle scattering, suggested that radioactivity is the result of the *decay*, or disintegration, of unstable nuclei.

Three types of radioactive decay occur in radioactive substances: alpha (α) decay, in which the emitted particles are ${}^4\text{He}$ nuclei; beta (β) decay, in which the emitted particles are either electrons or positrons; and gamma (γ) decay, in which the emitted particles are high-energy photons. A **positron** is a particle like the electron in all respects except that the positron has a charge of $+e$. (The positron is the *antiparticle* of the electron; see Section 46.2.) The symbol e^- is used to designate an electron, and e^+ designates a positron.

We can distinguish among these three forms of radiation by using the scheme described in Figure 44.9. The radiation from radioactive samples that emit all three types of particles is directed into a region in which there is a magnetic field. Following the particle in a field (magnetic) analysis model, the radiation beam splits into three components, two bending in opposite directions and the third experiencing no change in direction. This simple observation shows that the radiation of the undeflected beam carries no charge (the gamma ray), the component deflected upward corresponds to positively charged particles (alpha particles), and the component deflected downward corresponds to negatively charged particles (e^-). If the beam includes a positron (e^+), it is deflected upward like the alpha particle, but it follows a different trajectory due to its smaller mass.

The three types of radiation have quite different penetrating powers. Alpha particles barely penetrate a sheet of paper, beta particles can penetrate a few millimeters of aluminum, and gamma rays can penetrate several centimeters of lead.

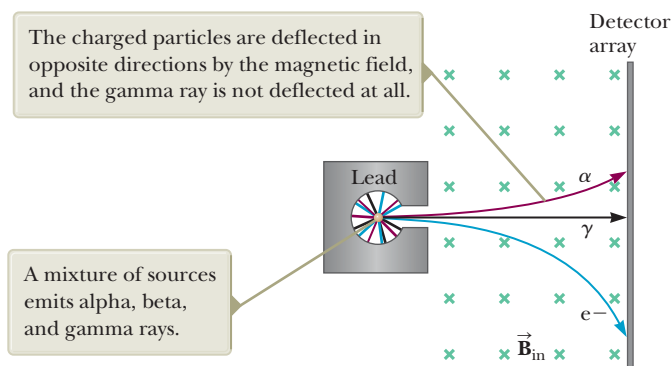
The decay process is probabilistic in nature and can be described with statistical calculations for a radioactive substance of macroscopic size containing a large number of radioactive nuclei. For such large numbers, the rate at which a particular decay process occurs in a sample is proportional to the number of radioactive nuclei present (that is, the number of nuclei that have not yet decayed). If N is the number of undecayed radioactive nuclei present at some instant, the rate of change of N with time is

$$\frac{dN}{dt} = -\lambda N \quad (44.5)$$

where λ , called the **decay constant**, is the probability of decay per nucleus per second. The negative sign indicates that dN/dt is negative; that is, N decreases in time.

Equation 44.5 can be written in the form

$$\frac{dN}{N} = -\lambda dt$$



Time & Life Pictures/Getty Images

Marie Curie

Polish Scientist (1867–1934)

In 1903, Marie Curie shared the Nobel Prize in Physics with her husband, Pierre, and with Becquerel for their studies of radioactive substances. In 1911, she was awarded a Nobel Prize in Chemistry for the discovery of radium and polonium.

Pitfall Prevention 44.3

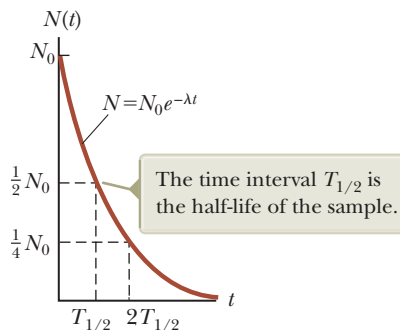
Rays or Particles? Early in the history of nuclear physics, the term *radiation* was used to describe the emanations from radioactive nuclei. We now know that alpha radiation and beta radiation involve the emission of particles with nonzero rest energy. Even though they are not examples of electromagnetic radiation, the use of the term *radiation* for all three types of emission is deeply entrenched in our language and in the physics community.

Pitfall Prevention 44.4

Notation Warning In Section 44.1, we introduced the symbol N as an integer representing the number of neutrons in a nucleus. In this discussion, the symbol N represents the number of undecayed nuclei in a radioactive sample remaining after some time interval. As you read further, be sure to consider the context to determine the appropriate meaning for the symbol N .

Figure 44.9 The radiation from radioactive sources can be separated into three components by using a magnetic field to deflect the charged particles. The detector array at the right records the events.

Figure 44.10 Plot of the exponential decay of radioactive nuclei. The vertical axis represents the number of undecayed radioactive nuclei present at any time t , and the horizontal axis is time.



Exponential behavior of the number of undecayed nuclei ►

which, upon integration, gives

$$N = N_0 e^{-\lambda t} \quad (44.6)$$

where the constant N_0 represents the number of undecayed radioactive nuclei at $t = 0$. Equation 44.6 shows that the number of undecayed radioactive nuclei in a sample decreases exponentially with time. The plot of N versus t shown in Figure 44.10 illustrates the exponential nature of the decay. The curve is similar to that for the time variation of electric charge on a discharging capacitor in an RC circuit, as studied in Section 28.4.

The **decay rate** R , which is the number of decays per second, can be obtained by combining Equations 44.5 and 44.6:

Exponential behavior of the decay rate ►

$$R = \left| \frac{dN}{dt} \right| = \lambda N = \lambda N_0 e^{-\lambda t} = R_0 e^{-\lambda t} \quad (44.7)$$

where $R_0 = \lambda N_0$ is the decay rate at $t = 0$. The decay rate R of a sample is often referred to as its **activity**. Note that both N and R decrease exponentially with time.

Another parameter useful in characterizing nuclear decay is the **half-life** $T_{1/2}$:

Pitfall Prevention 44.5

Half-life It is *not* true that all the original nuclei have decayed after two half-lives! In one half-life, half of the original nuclei will decay. In the second half-life, half of those remaining will decay, leaving $\frac{1}{4}$ of the original number.

The **half-life** of a radioactive substance is the time interval during which half of a given number of radioactive nuclei decay.

To find an expression for the half-life, we first set $N = N_0/2$ and $t = T_{1/2}$ in Equation 44.6 to give

$$\frac{N_0}{2} = N_0 e^{-\lambda T_{1/2}}$$

Canceling the N_0 factors and then taking the reciprocal of both sides, we obtain $e^{\lambda T_{1/2}} = 2$. Taking the natural logarithm of both sides gives

Half-life ►

$$T_{1/2} = \frac{\ln 2}{\lambda} = \frac{0.693}{\lambda} \quad (44.8)$$

After a time interval equal to one half-life, there are $N_0/2$ radioactive nuclei remaining (by definition); after two half-lives, half of these remaining nuclei have decayed and $N_0/4$ radioactive nuclei are left; after three half-lives, $N_0/8$ are left; and so on. In general, after n half-lives, the number of undecayed radioactive nuclei remaining is

$$N = N_0 \left(\frac{1}{2}\right)^n \quad (44.9)$$

where n can be an integer or a noninteger.

A frequently used unit of activity is the **curie** (Ci), defined as

The curie ►

$$1 \text{ Ci} \equiv 3.7 \times 10^{10} \text{ decays/s}$$

This value was originally selected because it is the approximate activity of 1 g of radium. The SI unit of activity is the **becquerel** (Bq):

The becquerel ►

$$1 \text{ Bq} \equiv 1 \text{ decay/s}$$

Therefore, $1 \text{ Ci} = 3.7 \times 10^{10} \text{ Bq}$. The curie is a rather large unit, and the more frequently used activity units are the millicurie and the microcurie.

- Quick Quiz 44.2** On your birthday, you measure the activity of a sample of ^{210}Bi , which has a half-life of 5.01 days. The activity you measure is $1.000 \mu\text{Ci}$. What is the activity of this sample on your next birthday? (a) $1.000 \mu\text{Ci}$ (b) 0 (c) $\sim 0.2 \mu\text{Ci}$
 (d) $\sim 0.01 \mu\text{Ci}$ (e) $\sim 10^{-22} \mu\text{Ci}$

Example 44.4 How Many Nuclei Are Left?

The isotope carbon-14, $^{14}_6\text{C}$, is radioactive and has a half-life of 5 730 years. If you start with a sample of 1 000 carbon-14 nuclei, how many nuclei will still be undecayed in 25 000 years?

SOLUTION

Conceptualize The time interval of 25 000 years is much longer than the half-life, so only a small fraction of the originally undecayed nuclei will remain.

Categorize The text of the problem allows us to categorize this example as a substitution problem involving radioactive decay.

Analyze Divide the time interval by the half-life to determine the number of half-lives:

$$n = \frac{25\,000 \text{ yr}}{5\,730 \text{ yr}} = 4.363$$

Determine how many undecayed nuclei are left after this many half-lives using Equation 44.9:

$$N = N_0 \left(\frac{1}{2}\right)^n = 1\,000 \left(\frac{1}{2}\right)^{4.363} = 49$$

Finalize As we have mentioned, radioactive decay is a probabilistic process and accurate statistical predictions are possible only with a very large number of atoms. The original sample in this example contains only 1 000 nuclei, which is certainly not a very large number. Therefore, if you counted the number of undecayed nuclei remaining after 25 000 years, it might not be exactly 49.

Example 44.5 The Activity of Carbon

At time $t = 0$, a radioactive sample contains $3.50 \mu\text{g}$ of pure $^{11}_6\text{C}$, which has a half-life of 20.4 min.

(A) Determine the number N_0 of nuclei in the sample at $t = 0$.

SOLUTION

Conceptualize The half-life is relatively short, so the number of undecayed nuclei drops rapidly. The molar mass of $^{11}_6\text{C}$ is approximately 11.0 g/mol.

Categorize We evaluate results using equations developed in this section, so we categorize this example as a substitution problem.

Find the number of moles in $3.50 \mu\text{g}$ of pure $^{11}_6\text{C}$:

$$n = \frac{3.50 \times 10^{-6} \text{ g}}{11.0 \text{ g/mol}} = 3.18 \times 10^{-7} \text{ mol}$$

Find the number of undecayed nuclei in this amount of pure $^{11}_6\text{C}$:

$$N_0 = (3.18 \times 10^{-7} \text{ mol})(6.02 \times 10^{23} \text{ nuclei/mol}) = 1.92 \times 10^{17} \text{ nuclei}$$

(B) What is the activity of the sample initially and after 8.00 h?

SOLUTION

Find the initial activity of the sample using Equations 44.7 and 44.8:

$$\begin{aligned} R_0 &= \lambda N_0 = \frac{0.693}{T_{1/2}} N_0 = \frac{0.693}{20.4 \text{ min}} \left(\frac{1 \text{ min}}{60 \text{ s}}\right) (1.92 \times 10^{17}) \\ &= (5.66 \times 10^{-4} \text{ s}^{-1})(1.92 \times 10^{17}) = 1.09 \times 10^{14} \text{ Bq} \end{aligned}$$

continued

44.5 continued

Use Equation 44.7 to find the activity at $t = 8.00 \text{ h} = 2.88 \times 10^4 \text{ s}$:

$$R = R_0 e^{-\lambda t} = (1.09 \times 10^{14} \text{ Bq}) e^{-(5.66 \times 10^{-4} \text{ s}^{-1})(2.88 \times 10^4 \text{ s})} = 8.96 \times 10^6 \text{ Bq}$$

Example 44.6 A Radioactive Isotope of Iodine

A sample of the isotope ^{131}I , which has a half-life of 8.04 days, has an activity of 5.0 mCi at the time of shipment. Upon receipt of the sample at a medical laboratory, the activity is 2.1 mCi. How much time has elapsed between the two measurements?

SOLUTION

Conceptualize The sample is continuously decaying as it is in transit. The decrease in the activity is 58% during the time interval between shipment and receipt, so we expect the elapsed time to be greater than the half-life of 8.04 d.

Categorize The stated activity corresponds to many decays per second, so N is large and we can categorize this problem as one in which we can use our statistical analysis of radioactivity.

Analyze Solve Equation 44.7 for the ratio of the final activity to the initial activity:

$$\frac{R}{R_0} = e^{-\lambda t}$$

Take the natural logarithm of both sides:

$$\ln\left(\frac{R}{R_0}\right) = -\lambda t$$

Solve for the time t :

$$(1) \quad t = -\frac{1}{\lambda} \ln\left(\frac{R}{R_0}\right)$$

Use Equation 44.8 to substitute for λ :

$$t = -\frac{T_{1/2}}{\ln 2} \ln\left(\frac{R}{R_0}\right)$$

Substitute numerical values:

$$t = -\frac{8.04 \text{ d}}{0.693} \ln\left(\frac{2.1 \text{ mCi}}{5.0 \text{ mCi}}\right) = 10 \text{ d}$$

Finalize This result is indeed greater than the half-life, as expected. This example demonstrates the difficulty in shipping radioactive samples with short half-lives. If the shipment is delayed by several days, only a small fraction of the sample might remain upon receipt. This difficulty can be addressed by shipping a combination of isotopes in which the desired isotope is the product of a decay occurring within the sample. It is possible for the desired isotope to be in *equilibrium*, in which case it is created at the same rate as it decays. Therefore, the amount of the desired isotope remains constant during the shipping process and subsequent storage. When needed, the desired isotope can be separated from the rest of the sample; its decay from the initial activity begins at this point rather than upon shipment.


44.5 The Decay Processes

As we stated in Section 44.4, a radioactive nucleus spontaneously decays by one of three processes: alpha decay, beta decay, or gamma decay. Figure 44.11 shows a close-up view of a portion of Figure 44.4 from $Z = 65$ to $Z = 80$. The black circles are the stable nuclei seen in Figure 44.4. In addition, unstable nuclei above and below the line of stability for each value of Z are shown. Above the line of stability, the blue circles show unstable nuclei that are neutron-rich and undergo a beta decay process in which an electron is emitted. Below the black circles are red circles corresponding to proton-rich unstable nuclei that primarily undergo a beta-decay process in which a positron is emitted or a competing process called electron capture. Beta decay and electron capture are described in more detail below. Further below the line of stabil-

ity (with a few exceptions) are tan circles that represent very proton-rich nuclei for which the primary decay mechanism is alpha decay, which we discuss first.

Alpha Decay

A nucleus emitting an alpha particle (${}^4_2\text{He}$) loses two protons and two neutrons. Therefore, the atomic number Z decreases by 2, the mass number A decreases by 4, and the neutron number decreases by 2. The decay can be written



where X is called the **parent nucleus** and Y the **daughter nucleus**. As a general rule in any decay expression such as this one, (1) the sum of the mass numbers A must be the same on both sides of the decay and (2) the sum of the atomic numbers Z must be the same on both sides of the decay. As examples, ${}^{238}\text{U}$ and ${}^{226}\text{Ra}$ are both alpha emitters and decay according to the schemes



The decay of ${}^{226}\text{Ra}$ is shown in Figure 44.12.

When the nucleus of one element changes into the nucleus of another as happens in alpha decay, the process is called **spontaneous decay**. In any spontaneous decay, relativistic energy and momentum of the parent nucleus as an isolated system must be conserved. The final components of the system are the daughter nucleus and the alpha particle. If we call M_X the mass of the parent nucleus, M_Y the mass of the daughter nucleus, and M_α the mass of the alpha particle, we can define the **disintegration energy** Q of the system as

$$Q = (M_X - M_Y - M_\alpha)c^2 \quad (44.13)$$

The energy Q is in joules when the masses are in kilograms and c is the speed of light, 3.00×10^8 m/s. When the masses are expressed in atomic mass units u , however, Q can be calculated in MeV using the expression

$$Q = (M_X - M_Y - M_\alpha) \times 931.494 \text{ MeV}/u \quad (44.14)$$

Table 44.2 (page 1396) contains information on selected isotopes, including masses of neutral atoms that can be used in Equation 44.14 and similar equations.

The disintegration energy Q is the amount of rest energy transformed and appears in the form of kinetic energy in the daughter nucleus and the alpha particle and is sometimes referred to as the Q value of the nuclear decay. Consider the case of the ${}^{226}\text{Ra}$ decay described in Figure 44.12. If the parent nucleus is at rest before the decay, the total kinetic energy of the products is 4.87 MeV. (See Example 44.7.) Most of this kinetic energy is associated with the alpha particle because this particle is much less massive than the daughter nucleus ${}^{222}\text{Rn}$. That is, because the system is also isolated in terms of momentum, the lighter alpha particle recoils with a much higher speed than does the daughter nucleus. Generally, less massive particles carry off most of the energy in nuclear decays.

Experimental observations of alpha-particle energies show a number of discrete energies rather than a single energy because the daughter nucleus may be left in an

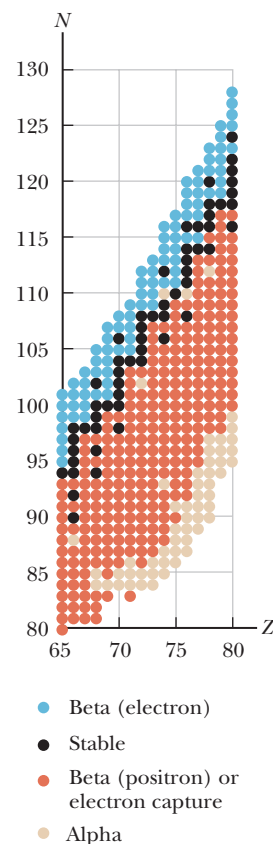


Figure 44.11 A close-up view of the line of stability in Figure 44.4 from $Z = 65$ to $Z = 80$. The black dots represent stable nuclei as in Figure 44.4. The other colored dots represent unstable isotopes above and below the line of stability, with the color of the dot indicating the primary means of decay.

Pitfall Prevention 44.6

Another Q We have seen the symbol Q before, but this use is a brand-new meaning for this symbol: the disintegration energy. In this context, it is not heat, charge, or quality factor for a resonance, for which we have used Q before.

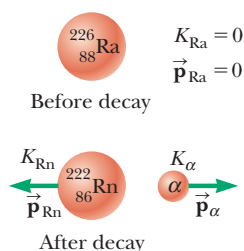


Figure 44.12 The alpha decay of radium-226. The radium nucleus is initially at rest. After the decay, the radon nucleus has kinetic energy K_{Rn} and momentum \vec{p}_{Rn} and the alpha particle has kinetic energy K_α and momentum \vec{p}_α .

Table 44.2 Chemical and Nuclear Information for Selected Isotopes

Atomic Number Z	Element	Chemical Symbol	Mass Number A (* means radioactive)	Mass of Neutral Atom (u)	Percent Abundance	Half-life, if Radioactive $T_{1/2}$
-1	electron	e^-	0	0.000 549		
0	neutron	n	1*	1.008 665		614 s
1	hydrogen	$^1\text{H} = \text{p}$	1	1.007 825	99.988 5	
	[deuterium	$^2\text{H} = \text{D}$]	2	2.014 102	0.011 5	
	[tritium	$^3\text{H} = \text{T}$]	3*	3.016 049		12.33 yr
2	helium	He	3	3.016 029	0.000 137	
	[alpha particle	$\alpha = ^4\text{He}$]	4	4.002 603	99.999 863	
			6*	6.018 889		0.81 s
3	lithium	Li	6	6.015 123	7.5	
			7	7.016 005	92.5	
4	beryllium	Be	7*	7.016 930		53.3 d
			8*	8.005 305		10^{-17} s
			9	9.012 182	100	
5	boron	B	10	10.012 937	19.9	
			11	11.009 305	80.1	
6	carbon	C	11*	11.011 434		20.4 min
			12	12.000 000	98.93	
			13	13.003 355	1.07	
			14*	14.003 242		5 730 yr
7	nitrogen	N	13*	13.005 739		9.96 min
			14	14.003 074	99.632	
			15	15.000 109	0.368	
8	oxygen	O	14*	14.008 596		70.6 s
			15*	15.003 066		122 s
			16	15.994 915	99.757	
			17	16.999 132	0.038	
			18	17.999 161	0.205	
9	fluorine	F	18*	18.000 938		109.8 min
			19	18.998 403	100	
10	neon	Ne	20	19.992 440	90.48	
11	sodium	Na	23	22.989 769	100	
12	magnesium	Mg	23*	22.994 124		11.3 s
			24	23.985 042	78.99	
13	aluminum	Al	27	26.981 539	100	
14	silicon	Si	27*	26.986 705		4.2 s
15	phosphorus	P	30*	29.978 314		2.50 min
			31	30.973 762	100	
			32*	31.973 907		14.26 d
16	sulfur	S	32	31.972 071	94.93	
19	potassium	K	39	38.963 707	93.258 1	
			40*	39.963 998	0.011 7	1.28×10^9 yr
20	calcium	Ca	40	39.962 591	96.941	
			42	41.958 618	0.647	
			43	42.958 767	0.135	
25	manganese	Mn	55	54.938 045	100	
26	iron	Fe	56	55.934 938	91.754	
			57	56.935 394	2.119	

continued

Table 44.2 Chemical and Nuclear Information for Selected Isotopes (*continued*)

Atomic Number Z	Element	Chemical Symbol	Mass Number A (* means radioactive)	Mass of Neutral Atom (u)	Percent Abundance	Half-life, if Radioactive $T_{1/2}$
27	cobalt	Co	57*	56.936 291	100	272 d
			59	58.933 195		5.27 yr
			60*	59.933 817		
28	nickel	Ni	58	57.935 343	68.076 9	
			60	59.930 786	26.223 1	
29	copper	Cu	63	62.929 598	69.17	12.7 h
			64*	63.929 764	30.83	
			65	64.927 789		
30	zinc	Zn	64	63.929 142	48.63	
37	rubidium	Rb	87*	86.909 181	27.83	
38	strontium	Sr	87	86.908 877	7.00	29.1 yr
			88	87.905 612	82.58	
			90*	89.907 738	100	
			93	92.906 378		
42	molybdenum	Mo	94	93.905 088	9.25	
44	ruthenium	Ru	98	97.905 287	1.87	
54	xenon	Xe	136*	135.907 219		2.4×10^{21} yr
55	cesium	Cs	137*	136.907 090		30 yr
56	barium	Ba	137	136.905 827	11.232	
58	cerium	Ce	140	139.905 439	88.450	
59	praseodymium	Pr	141	140.907 653	100	
60	neodymium	Nd	144*	143.910 087	23.8	2.3×10^{15} yr
61	promethium	Pm	145*	144.912 749		17.7 yr
79	gold	Au	197	196.966 569	100	
80	mercury	Hg	198	197.966 769	9.97	26.8 min
			202	201.970 643	29.86	
			206	205.974 465	24.1	
			207	206.975 897	22.1	
			208	207.976 652	52.4	
83	bismuth	Bi	214*	213.999 805	100	138.38 d
			209	208.980 399		
			210*	209.982 874		
			216*	216.001 915		
84	polonium	Po	218*	218.008 973	100	0.145 s
			218*	218.008 973		3.10 min
			220*	220.011 394		55.6 s
86	radon	Rn	222*	222.017 578	100	3.823 d
			222*	222.017 578		1 600 yr
			226*	226.025 410		1.40×10^{10} yr
88	radium	Ra	226*	226.025 410	100	24.1 d
			232*	232.038 055		
90	thorium	Th	232*	232.038 055	100	2.45×10^5 yr
			234*	234.043 601		7.04×10^8 yr
			234*	234.040 952		2.34×10^7 yr
			235*	235.043 930		4.47×10^9 yr
			236*	236.045 568		1.15×10^5 yr
92	uranium	U	238*	238.050 788	99.274 5	2.14×10^6 yr
			238*	238.050 788		24 120 yr
			236*	236.046 570		
93	neptunium	Np	237*	237.048 173	99.274 5	
			237*	237.048 173		
94	plutonium	Pu	239*	239.052 163	99.274 5	
			239*	239.052 163		

Source: G. Audi, A. H. Wapstra, and C. Thibault, "The AME2003 Atomic Mass Evaluation," *Nuclear Physics A* **729**:337–676, 2003.

excited quantum state after the decay. As a result, not all the disintegration energy is available as kinetic energy of the alpha particle and daughter nucleus. The emission of an alpha particle is followed by one or more gamma-ray photons (discussed shortly) as the excited nucleus decays to the ground state. The observed discrete alpha-particle energies represent evidence of the quantized nature of the nucleus and allow a determination of the energies of the quantum states.

If one assumes ^{238}U (or any other alpha emitter) decays by emitting either a proton or a neutron, the mass of the decay products would exceed that of the parent nucleus, corresponding to a negative Q value. A negative Q value indicates that such a proposed decay does not occur spontaneously.

Quick Quiz 44.3 Which of the following is the correct daughter nucleus associated with the alpha decay of $^{157}_{72}\text{Hf}$? (a) $^{153}_{72}\text{Hf}$ (b) $^{153}_{70}\text{Yb}$ (c) $^{157}_{70}\text{Yb}$

Example 44.7

The Energy Liberated When Radium Decays

AM

The ^{226}Ra nucleus undergoes alpha decay according to Equation 44.12.

(A) Calculate the Q value for this process. From Table 44.2, the masses are 226.025 410 u for ^{226}Ra , 222.017 578 u for ^{222}Rn , and 4.002 603 u for ^4_2He .

SOLUTION

Conceptualize Study Figure 44.12 to understand the process of alpha decay in this nucleus.

Categorize The parent nucleus is an *isolated system* that decays into an alpha particle and a daughter nucleus. The system is isolated in terms of both *energy* and *momentum*.

Analyze Evaluate Q using Equation 44.14:

$$Q = (M_X - M_Y - M_\alpha) \times 931.494 \text{ MeV/u}$$

$$= (226.025 \ 410 \text{ u} - 222.017 \ 578 \text{ u} - 4.002 \ 603 \text{ u}) \times 931.494 \text{ MeV/u}$$

$$= (0.005 \ 229 \text{ u}) \times 931.494 \text{ MeV/u} = 4.87 \text{ MeV}$$

(B) What is the kinetic energy of the alpha particle after the decay?

Analyze The value of 4.87 MeV is the disintegration energy for the decay. It includes the kinetic energy of both the alpha particle and the daughter nucleus after the decay. Therefore, the kinetic energy of the alpha particle would be *less* than 4.87 MeV.

Set up a conservation of momentum equation, noting that the initial momentum of the system is zero:

$$(1) \quad 0 = M_Y v_Y - M_\alpha v_\alpha$$

Set the disintegration energy equal to the sum of the kinetic energies of the alpha particle and the daughter nucleus (assuming the daughter nucleus is left in the ground state):

$$(2) \quad Q = \frac{1}{2} M_\alpha v_\alpha^2 + \frac{1}{2} M_Y v_Y^2$$

Solve Equation (1) for v_Y and substitute into Equation (2):

$$Q = \frac{1}{2} M_\alpha v_\alpha^2 + \frac{1}{2} M_Y \left(\frac{M_\alpha v_\alpha}{M_Y} \right)^2 = \frac{1}{2} M_\alpha v_\alpha^2 \left(1 + \frac{M_\alpha}{M_Y} \right)$$

$$Q = K_\alpha \left(\frac{M_Y + M_\alpha}{M_Y} \right)$$

Solve for the kinetic energy of the alpha particle:

$$K_\alpha = Q \left(\frac{M_Y}{M_Y + M_\alpha} \right)$$

Evaluate this kinetic energy for the specific decay of ^{226}Ra that we are exploring in this example:

$$K_\alpha = (4.87 \text{ MeV}) \left(\frac{222}{222 + 4} \right) = 4.78 \text{ MeV}$$

Finalize The kinetic energy of the alpha particle is indeed less than the disintegration energy, but notice that the alpha particle carries away *most* of the energy available in the decay.

To understand the mechanism of alpha decay, let's model the parent nucleus as a system consisting of (1) the alpha particle, already formed as an entity within the nucleus, and (2) the daughter nucleus that will result when the alpha particle is emitted. Figure 44.13 shows a plot of potential energy versus separation distance r between the alpha particle and the daughter nucleus, where the distance marked R is the range of the nuclear force. The curve represents the combined effects of (1) the repulsive Coulomb force, which gives the positive part of the curve for $r > R$, and (2) the attractive nuclear force, which causes the curve to be negative for $r < R$. As shown in Example 44.7, a typical disintegration energy Q is approximately 5 MeV, which is the approximate kinetic energy of the alpha particle, represented by the lower dashed line in Figure 44.13.

According to classical physics, the alpha particle is trapped in a potential well. How, then, does it ever escape from the nucleus? The answer to this question was first provided by George Gamow (1904–1968) in 1928 and independently by R. W. Gurney (1898–1953) and E. U. Condon (1902–1974) in 1929, using quantum mechanics. In the view of quantum mechanics, there is always some probability that a particle can tunnel through a barrier (Section 41.5). That is exactly how we can describe alpha decay: the alpha particle tunnels through the barrier in Figure 44.13, escaping the nucleus. Furthermore, this model agrees with the observation that higher-energy alpha particles come from nuclei with shorter half-lives. For higher-energy alpha particles in Figure 44.13, the barrier is narrower and the probability is higher that tunneling occurs. The higher probability translates to a shorter half-life.

As an example, consider the decays of ^{238}U and ^{226}Ra in Equations 44.11 and 44.12, along with the corresponding half-lives and alpha-particle energies:

$$^{238}\text{U}: \quad T_{1/2} = 4.47 \times 10^9 \text{ yr} \quad K_{\alpha} = 4.20 \text{ MeV}$$

$$^{226}\text{Ra}: \quad T_{1/2} = 1.60 \times 10^3 \text{ yr} \quad K_{\alpha} = 4.78 \text{ MeV}$$

Notice that a relatively small difference in alpha-particle energy is associated with a tremendous difference of six orders of magnitude in the half-life. The origin of this effect can be understood as follows. Figure 44.13 shows that the curve below an alpha-particle energy of 5 MeV has a slope with a relatively small magnitude. Therefore, a small difference in energy on the vertical axis has a relatively large effect on the width of the potential barrier. Second, recall Equation 41.22, which describes the exponential dependence of the probability of transmission on the barrier width. These two factors combine to give the very sensitive relationship between half-life and alpha-particle energy that the data above suggest.

A life-saving application of alpha decay is the household smoke detector, shown in Figure 44.14. The detector consists of an ionization chamber, a sensitive current detector, and an alarm. A weak radioactive source (usually ^{241}Am) ionizes the air in the chamber of the detector, creating charged particles. A voltage is maintained between the plates inside the chamber, setting up a small but detectable current in the external circuit due to the ions acting as charge carriers between the plates. As long as the current is maintained, the alarm is deactivated. If smoke drifts into the chamber, however, the ions become attached to the smoke particles. These heavier particles do not drift as readily as do the lighter ions, which causes a decrease in the detector current. The external circuit senses this decrease in current and sets off the alarm.

Beta Decay

When a radioactive nucleus undergoes beta decay, the daughter nucleus contains the same number of nucleons as the parent nucleus but the atomic number is changed by 1, which means that the number of protons changes:



Classically, the 5-MeV energy of the alpha particle is not sufficiently large to overcome the energy barrier, so the particle should not be able to escape from the nucleus.

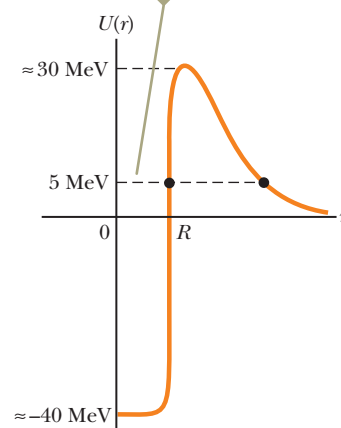


Figure 44.13 Potential energy versus separation distance for a system consisting of an alpha particle and a daughter nucleus. The alpha particle escapes by tunneling through the barrier.



© Michael Dalton/Fundamental Photographs, NYC

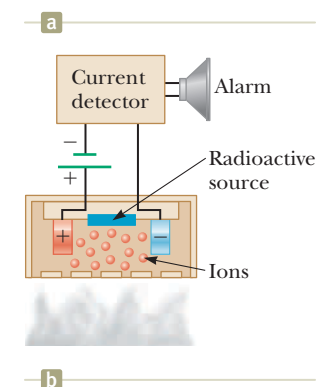


Figure 44.14 (a) A smoke detector uses alpha decay to determine whether smoke is in the air. The alpha source is in the black cylinder at the right. (b) Smoke entering the chamber reduces the detected current, causing the alarm to sound.

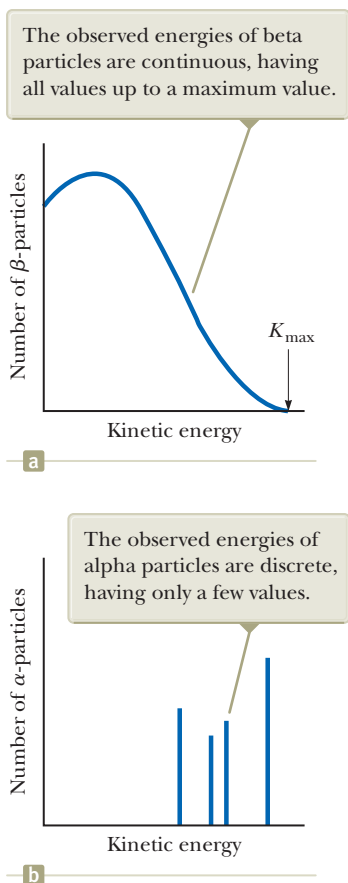


Figure 44.15 (a) Distribution of beta-particle energies in a typical beta decay. (b) Distribution of alpha-particle energies in a typical alpha decay.

where, as mentioned in Section 44.4, e^- designates an electron and e^+ designates a positron, with *beta particle* being the general term referring to either. *Beta decay is not described completely by these expressions.* We shall give reasons for this statement shortly.

As with alpha decay, the nucleon number and total charge are both conserved in beta decays. Because A does not change but Z does, we conclude that in beta decay, either a neutron changes to a proton (Eq. 44.15) or a proton changes to a neutron (Eq. 44.16). Note that the electron or positron emitted in these decays is not present beforehand in the nucleus; it is created in the process of the decay from the rest energy of the decaying nucleus. Two typical beta-decay processes are



Let's consider the energy of the system undergoing beta decay before and after the decay. As with alpha decay, energy of the isolated system must be conserved. Experimentally, it is found that beta particles from a single type of nucleus are emitted over a continuous range of energies (Fig. 44.15a), as opposed to alpha decay, in which the alpha particles are emitted with discrete energies (Fig. 44.15b). The kinetic energy of the system after the decay is equal to the decrease in rest energy of the system, that is, the Q value. Because all decaying nuclei in the sample have the same initial mass, however, *the Q value must be the same for each decay.* So, why do the emitted particles have the range of kinetic energies shown in Figure 44.15a? The isolated system model and the law of conservation of energy seem to be violated! It becomes worse: further analysis of the decay processes described by Equations 44.15 and 44.16 shows that the laws of conservation of angular momentum (spin) and linear momentum are also violated!

After a great deal of experimental and theoretical study, Pauli in 1930 proposed that a third particle must be present in the decay products to carry away the “missing” energy and momentum. Fermi later named this particle the **neutrino** (little neutral one) because it had to be electrically neutral and have little or no mass. Although it eluded detection for many years, the neutrino (symbol ν , Greek nu) was finally detected experimentally in 1956 by Frederick Reines (1918–1998), who received the Nobel Prize in Physics for this work in 1995. The neutrino has the following properties:

- It has zero electric charge.
- Its mass is either zero (in which case it travels at the speed of light) or very small; much recent persuasive experimental evidence suggests that the neutrino mass is not zero. Current experiments place the upper bound of the mass of the neutrino at approximately $7 \text{ eV}/c^2$.
- It has a spin of $\frac{1}{2}$, which allows the law of conservation of angular momentum to be satisfied in beta decay.
- It interacts very weakly with matter and is therefore very difficult to detect.

We can now write the beta-decay processes (Eqs. 44.15 and 44.16) in their correct and complete form:

Beta decay processes ▶



as well as those for carbon-14 and nitrogen-12 (Eqs. 44.17 and 44.18):



where the symbol $\bar{\nu}$ represents the **antineutrino**, the antiparticle to the neutrino. We shall discuss antiparticles further in Chapter 46. For now, it suffices to say that a neutrino is emitted in positron decay and an antineutrino is emitted in electron

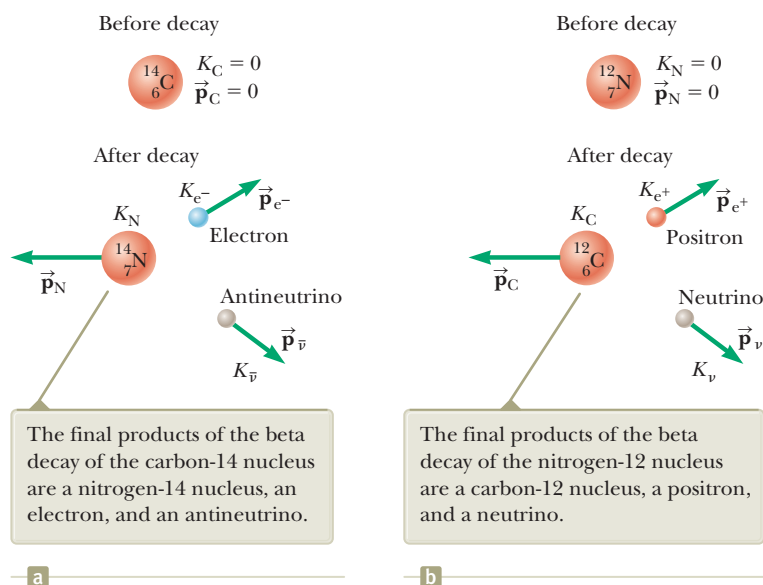


Figure 44.16 (a) The beta decay of carbon-14. (b) The beta decay of nitrogen-12.

decay. As with alpha decay, the decays listed above are analyzed by applying conservation laws, but relativistic expressions must be used for beta particles because their kinetic energy is large (typically 1 MeV) compared with their rest energy of 0.511 MeV. Figure 44.16 shows a pictorial representation of the decays described by Equations 44.21 and 44.22.

In Equation 44.19, the number of protons has increased by one and the number of neutrons has decreased by one. We can write the fundamental process of e^- decay in terms of a neutron changing into a proton as follows:

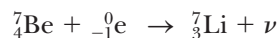


The electron and the antineutrino are ejected from the nucleus, with the net result that there is one more proton and one fewer neutron, consistent with the changes in Z and $A - Z$. A similar process occurs in e^+ decay, with a proton changing into a neutron, a positron, and a neutrino. This latter process can only occur within the nucleus, with the result that the nuclear mass decreases. It cannot occur for an isolated proton because its mass is less than that of the neutron.

A process that competes with e^+ decay is **electron capture**, which occurs when a parent nucleus captures one of its own orbital electrons and emits a neutrino. The final product after decay is a nucleus whose charge is $Z - 1$:



In most cases, it is a K-shell electron that is captured and the process is therefore referred to as **K capture**. One example is the capture of an electron by ${}^7_4\text{Be}$:



Because the neutrino is very difficult to detect, electron capture is usually observed by the x-rays given off as higher-shell electrons cascade downward to fill the vacancy created in the K shell.

Finally, we specify Q values for the beta-decay processes. The Q values for e^- decay and electron capture are given by $Q = (M_X - M_Y)c^2$, where M_X and M_Y are the masses of neutral atoms. In e^- decay, the parent nucleus experiences an increase in atomic number and, for the atom to become neutral, an electron must be absorbed by the atom. If the neutral parent atom and an electron (which will eventually combine with the daughter to form a neutral atom) is the initial system and the final system is the neutral daughter atom and the beta-ejected electron, the system contains a free electron both before and after the decay. Therefore, in subtracting the initial and final masses of the system, this electron mass cancels.

◀ Electron capture

Pitfall Prevention 44.7

Mass Number of the Electron An alternative notation for an electron, as we see in Equation 44.24, is the symbol ${}^0_{-1}e$, which does not imply that the electron has zero rest energy. The mass of the electron is so much smaller than that of the lightest nucleon, however, that we approximate it as zero in the context of nuclear decays and reactions.

The Q values for e^+ decay are given by $Q = (M_X - M_Y - 2m_e)c^2$. The extra term $-2m_e c^2$ in this expression is necessary because the atomic number of the parent decreases by one when the daughter is formed. After it is formed by the decay, the daughter atom sheds one electron to form a neutral atom. Therefore, the final products are the daughter atom, the shed electron, and the ejected positron.

These relationships are useful in determining whether or not a process is energetically possible. For example, the Q value for proposed e^+ decay for a particular parent nucleus may turn out to be negative. In that case, this decay does not occur. The Q value for electron capture for this parent nucleus, however, may be a positive number, so electron capture can occur even though e^+ decay is not possible. Such is the case for the decay of ${}^7_4\text{Be}$ shown above.

Quick Quiz 44.4 Which of the following is the correct daughter nucleus associated with the beta decay of ${}^{184}_{72}\text{Hf}$? (a) ${}^{183}_{72}\text{Hf}$ (b) ${}^{183}_{73}\text{Ta}$ (c) ${}^{184}_{73}\text{Ta}$

Carbon Dating

The beta decay of ${}^{14}\text{C}$ (Eq. 44.21) is commonly used to date organic samples. Cosmic rays in the upper atmosphere cause nuclear reactions (Section 44.7) that create ${}^{14}\text{C}$. The ratio of ${}^{14}\text{C}$ to ${}^{12}\text{C}$ in the carbon dioxide molecules of our atmosphere has a constant value of approximately $r_0 = 1.3 \times 10^{-12}$. The carbon atoms in all living organisms have this same ${}^{14}\text{C}/{}^{12}\text{C}$ ratio r_0 because the organisms continuously exchange carbon dioxide with their surroundings. When an organism dies, however, it no longer absorbs ${}^{14}\text{C}$ from the atmosphere, and so the ${}^{14}\text{C}/{}^{12}\text{C}$ ratio decreases as the ${}^{14}\text{C}$ decays with a half-life of 5 730 yr. It is therefore possible to measure the age of a material by measuring its ${}^{14}\text{C}$ activity. Using this technique, scientists have been able to identify samples of wood, charcoal, bone, and shell as having lived from 1 000 to 25 000 years ago. This knowledge has helped us reconstruct the history of living organisms—including humans—during this time span.

A particularly interesting example is the dating of the Dead Sea Scrolls. This group of manuscripts was discovered by a shepherd in 1947. Translation showed them to be religious documents, including most of the books of the Old Testament. Because of their historical and religious significance, scholars wanted to know their age. Carbon dating applied to the material in which they were wrapped established their age at approximately 1 950 yr.

Conceptual Example 44.8

The Age of Iceman

In 1991, German tourists discovered the well-preserved remains of a man, now called “Ötzi the Iceman,” trapped in a glacier in the Italian Alps. (See the photograph at the opening of this chapter.) Radioactive dating with ${}^{14}\text{C}$ revealed that this person was alive approximately 5 300 years ago. Why did scientists date a sample of Ötzi using ${}^{14}\text{C}$ rather than ${}^{11}\text{C}$, which is a beta emitter having a half-life of 20.4 min?

SOLUTION

Because ${}^{14}\text{C}$ has a half-life of 5 730 yr, the fraction of ${}^{14}\text{C}$ nuclei remaining after thousands of years is high enough to allow accurate measurements of changes in the sample’s activity. Because ${}^{11}\text{C}$ has a very short half-life, it is not useful; its activity decreases to a vanishingly small value over the age of the sample, making it impossible to detect.

An isotope used to date a sample must be present in a known amount in the sample when it is formed. As a gen-

eral rule, the isotope chosen to date a sample should also have a half-life that is on the same order of magnitude as the age of the sample. If the half-life is much less than the age of the sample, there won’t be enough activity left to measure because almost all the original radioactive nuclei will have decayed. If the half-life is much greater than the age of the sample, the amount of decay that has taken place since the sample died will be too small to measure. For example, if you have a specimen estimated

▶ 44.8 continued

to have died 50 years ago, neither ^{14}C (5 730 yr) nor ^{11}C (20 min) is suitable. If you know your sample contains hydrogen, however, you can measure the activity of ^3H (tritium), a beta emitter that has a half-life of 12.3 yr.

Example 44.9 Radioactive Dating

A piece of charcoal containing 25.0 g of carbon is found in some ruins of an ancient city. The sample shows a ^{14}C activity R of 250 decays/min. How long has the tree from which this charcoal came been dead?

SOLUTION

Conceptualize Because the charcoal was found in ancient ruins, we expect the current activity to be smaller than the initial activity. If we can determine the initial activity, we can find out how long the wood has been dead.

Categorize The text of the question helps us categorize this example as a carbon dating problem.

Analyze Solve Equation 44.7 for t :

$$(1) \quad t = -\frac{1}{\lambda} \ln \left(\frac{R}{R_0} \right)$$

Evaluate the ratio R/R_0 using Equation 44.7, the initial value of the $^{14}\text{C}/^{12}\text{C}$ ratio r_0 , the number of moles n of carbon, and Avogadro's number N_A :

$$\frac{R}{R_0} = \frac{R}{\lambda N_0(^{14}\text{C})} = \frac{R}{\lambda r_0 N_0(^{12}\text{C})} = \frac{R}{\lambda r_0 n N_A}$$

Replace the number of moles in terms of the molar mass M of carbon and the mass m of the sample and substitute for the decay constant λ :

$$\frac{R}{R_0} = \frac{R}{(\ln 2 / T_{1/2}) r_0 (m/M) N_A} = \frac{R M T_{1/2}}{r_0 m N_A \ln 2}$$

Substitute numerical values:

$$\begin{aligned} \frac{R}{R_0} &= \frac{(250 \text{ min}^{-1})(12.0 \text{ g/mol})(5 730 \text{ yr})}{(1.3 \times 10^{-12})(25.0 \text{ g})(6.022 \times 10^{23} \text{ mol}^{-1}) \ln 2} \left(\frac{3.156 \times 10^7 \text{ s}}{1 \text{ yr}} \right) \left(\frac{1 \text{ min}}{60 \text{ s}} \right) \\ &= 0.667 \end{aligned}$$

Substitute this ratio into Equation (1) and substitute for the decay constant λ :

$$\begin{aligned} t &= -\frac{1}{\lambda} \ln \left(\frac{R}{R_0} \right) = -\frac{T_{1/2}}{\ln 2} \ln \left(\frac{R}{R_0} \right) \\ &= -\frac{5 730 \text{ yr}}{\ln 2} \ln (0.667) = 3.4 \times 10^3 \text{ yr} \end{aligned}$$

Finalize Note that the time interval found here is on the same order of magnitude as the half-life, so ^{14}C is a valid isotope to use for this sample, as discussed in Conceptual Example 44.8.

Gamma Decay

Very often, a nucleus that undergoes radioactive decay is left in an excited energy state. The nucleus can then undergo a second decay to a lower-energy state, perhaps to the ground state, by emitting a high-energy photon:



◀ Gamma decay

where X^* indicates a nucleus in an excited state. The typical half-life of an excited nuclear state is 10^{-10} s. Photons emitted in such a de-excitation process are called gamma rays. Such photons have very high energy (1 MeV to 1 GeV) relative to the energy of visible light (approximately 1 eV). Recall from Section 42.3 that the energy of a photon emitted or absorbed by an atom equals the difference in energy

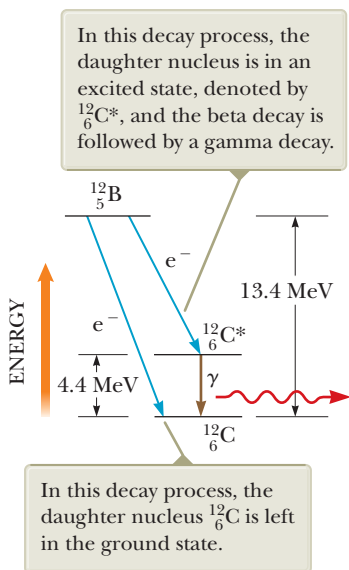


Figure 44.17 An energy-level diagram showing the initial nuclear state of a ^{12}B nucleus and two possible lower-energy states of the ^{12}C nucleus.

between the two electronic states involved in the transition. Similarly, a gamma-ray photon has an energy hf that equals the energy difference ΔE between two nuclear energy levels. When a nucleus decays by emitting a gamma ray, the only change in the nucleus is that it ends up in a lower-energy state. There are no changes in Z , N , or A .

A nucleus may reach an excited state as the result of a violent collision with another particle. More common, however, is for a nucleus to be in an excited state after it has undergone alpha or beta decay. The following sequence of events represents a typical situation in which gamma decay occurs:




Figure 44.17 shows the decay scheme for ^{12}B , which undergoes beta decay to either of two levels of ^{12}C . It can either (1) decay directly to the ground state of ^{12}C by emitting a 13.4-MeV electron or (2) undergo beta decay to an excited state of $^{12}\text{C}^*$ followed by gamma decay to the ground state. The latter process results in the emission of a 9.0-MeV electron and a 4.4-MeV photon.

The various pathways by which a radioactive nucleus can undergo decay are summarized in Table 44.3.

44.6 Natural Radioactivity

Radioactive nuclei are generally classified into two groups: (1) unstable nuclei found in nature, which give rise to **natural radioactivity**, and (2) unstable nuclei produced in the laboratory through nuclear reactions, which exhibit **artificial radioactivity**.

As Table 44.4 shows, there are three series of naturally occurring radioactive nuclei. Each series starts with a specific long-lived radioactive isotope whose half-life exceeds that of any of its unstable descendants. The three natural series begin with the isotopes ^{238}U , ^{235}U , and ^{232}Th , and the corresponding stable end products are three isotopes of lead: ^{206}Pb , ^{207}Pb , and ^{208}Pb . The fourth series in Table 44.4 begins with ^{237}Np and has as its stable end product ^{209}Bi . The element ^{237}Np is a *transuranic* element (one having an atomic number greater than that of uranium) not found in nature. This element has a half-life of “only” 2.14×10^6 years.

Figure 44.18 shows the successive decays for the ^{232}Th series. First, ^{232}Th undergoes alpha decay to ^{228}Ra . Next, ^{228}Ra undergoes two successive beta decays to ^{228}Th . The series continues and finally branches when it reaches ^{212}Bi . At this point, there are two decay possibilities. The sequence shown in Figure 44.18 is characterized by a mass-number decrease of either 4 (for alpha decays) or 0 (for beta or gamma decays). The two uranium series are more complex than the ^{232}Th series. In addition, several naturally occurring radioactive isotopes, such as ^{14}C and ^{40}K , are not part of any decay series.

Because of these radioactive series, our environment is constantly replenished with radioactive elements that would otherwise have disappeared long ago. For example, because our solar system is approximately 5×10^9 years old, the supply of

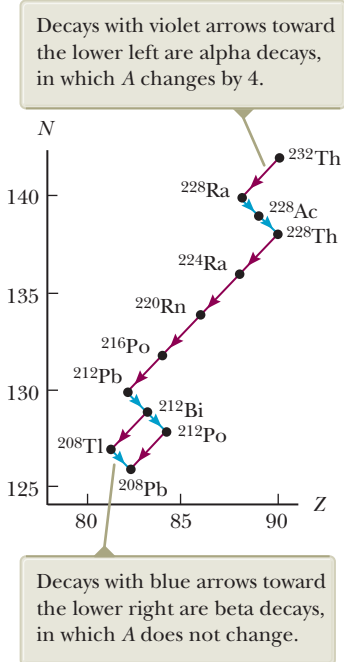


Figure 44.18 Successive decays for the ^{232}Th series.

Table 44.3 Various Decay Pathways

Alpha decay	$^A_Z\text{X} \rightarrow ^{A-4}_{Z-2}\text{Y} + ^4_2\text{He}$
Beta decay (e^-)	$^A_Z\text{X} \rightarrow ^A_{Z+1}\text{Y} + e^- + \bar{\nu}$
Beta decay (e^+)	$^A_Z\text{X} \rightarrow ^A_{Z-1}\text{Y} + e^+ + \nu$
Electron capture	$^A_Z\text{X} + e^- \rightarrow ^A_{Z-1}\text{Y} + \nu$
Gamma decay	$^A_Z\text{X}^* \rightarrow ^A_Z\text{X} + \gamma$

Table 44.4 The Four Radioactive Series

Series	Starting Isotope	Half-life (years)	Stable End Product
Uranium	$^{238}_{92}\text{U}$	4.47×10^9	$^{206}_{82}\text{Pb}$
Actinium	$^{235}_{92}\text{U}$	7.04×10^8	$^{207}_{82}\text{Pb}$
Thorium	$^{232}_{90}\text{Th}$	1.41×10^{10}	$^{208}_{82}\text{Pb}$
Neptunium	$^{237}_{93}\text{Np}$	2.14×10^6	$^{209}_{83}\text{Bi}$

^{226}Ra (whose half-life is only 1 600 years) would have been depleted by radioactive decay long ago if it were not for the radioactive series starting with ^{238}U .

44.7 Nuclear Reactions

We have studied radioactivity, which is a spontaneous process in which the structure of a nucleus changes. It is also possible to stimulate changes in the structure of nuclei by bombarding them with energetic particles. Such collisions, which change the identity of the target nuclei, are called **nuclear reactions**. Rutherford was the first to observe them, in 1919, using naturally occurring radioactive sources for the bombarding particles. Since then, a wide variety of nuclear reactions has been observed following the development of charged-particle accelerators in the 1930s. With today's advanced technology in particle accelerators and particle detectors, the Large Hadron Collider (see Section 46.10) in Europe can achieve particle energies of $14\,000\text{ GeV} = 14\text{ TeV}$. These high-energy particles are used to create new particles whose properties are helping to solve the mysteries of the nucleus.

Consider a reaction in which a target nucleus X is bombarded by a particle a, resulting in a daughter nucleus Y and an outgoing particle b:




Sometimes this reaction is written in the more compact form



In Section 44.5, the Q value, or disintegration energy, of a radioactive decay was defined as the rest energy transformed to kinetic energy as a result of the decay process. Likewise, we define the **reaction energy** Q associated with a nuclear reaction as *the difference between the initial and final rest energies resulting from the reaction*:

$$Q = (M_a + M_X - M_Y - M_b)c^2 \quad (44.29) \quad \leftarrow \text{Reaction energy } Q$$

As an example, consider the reaction ${}^7\text{Li}(p, \alpha){}^4\text{He}$. The notation p indicates a proton, which is a hydrogen nucleus. Therefore, we can write this reaction in the expanded form



The Q value for this reaction is 17.3 MeV. A reaction such as this one, for which Q is positive, is called **exothermic**. A reaction for which Q is negative is called **endothermic**. To satisfy conservation of momentum for the isolated system, an endothermic reaction does not occur unless the bombarding particle has a kinetic energy greater than Q . (See Problem 74.) The minimum energy necessary for such a reaction to occur is called the **threshold energy**.

If particles a and b in a nuclear reaction are identical so that X and Y are also necessarily identical, the reaction is called a **scattering event**. If the kinetic energy of the system (a and X) before the event is the same as that of the system (b and Y) after the event, it is classified as *elastic scattering*. If the kinetic energy of the system after the event is less than that before the event, the reaction is described as *inelastic scattering*. In this case, the target nucleus has been raised to an excited state by the event, which accounts for the difference in energy. The final system now consists of b and an excited nucleus Y^* , and eventually it will become b, Y, and γ , where γ is the gamma-ray photon that is emitted when the system returns to the ground state. This elastic and inelastic terminology is identical to that used in describing collisions between macroscopic objects as discussed in Section 9.4.

In addition to energy and momentum, the total charge and total number of nucleons must be conserved in any nuclear reaction. For example, consider the

reaction ${}^1_1\text{H} + {}^{19}_9\text{F} \rightarrow {}^{16}_8\text{O} + {}^4_2\text{He}$, which has a Q value of 8.11 MeV. We can show this reaction more completely as



The total number of nucleons before the reaction ($1 + 19 = 20$) is equal to the total number after the reaction ($16 + 4 = 20$). Furthermore, the total charge is the same before ($1 + 9$) and after ($8 + 2$) the reaction.

44.8 Nuclear Magnetic Resonance and Magnetic Resonance Imaging

In this section, we describe an important application of nuclear physics in medicine called *magnetic resonance imaging*. To understand this application, we first discuss the spin angular momentum of the nucleus. This discussion has parallels with the discussion of spin for atomic electrons.

In Chapter 42, we discussed that the electron has an intrinsic angular momentum, called spin. Nuclei also have spin because their component particles—neutrons and protons—each have spin $\frac{1}{2}$ as well as orbital angular momentum within the nucleus. All types of angular momentum obey the quantum rules that were outlined for orbital and spin angular momentum in Chapter 42. In particular, two quantum numbers associated with the angular momentum determine the allowed values of the magnitude of the angular momentum vector and its direction in space. The magnitude of the nuclear angular momentum is $\sqrt{I(I+1)}\hbar$, where I is called the **nuclear spin quantum number** and may be an integer or a half-integer, depending on how the individual proton and neutron spins combine. The quantum number I is the analog to ℓ for the electron in an atom as discussed in Section 42.6. Furthermore, there is a quantum number m_I that is the analog to m_ℓ , in that the allowed projections of the nuclear spin angular momentum vector on the z axis are $m_I\hbar$. The values of m_I range from $-I$ to $+I$ in steps of 1. (In fact, for *any* type of spin with a quantum number S , there is a quantum number m_S that ranges in value from $-S$ to $+S$ in steps of 1.) Therefore, the maximum value of the z component of the spin angular momentum vector is $I\hbar$. Figure 44.19 is a vector model (see Section 42.6) illustrating the possible orientations of the nuclear spin vector and its projections along the z axis for the case in which $I = \frac{3}{2}$.

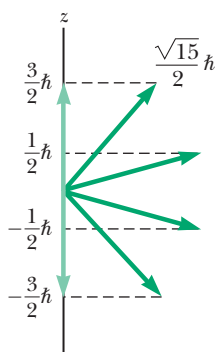


Figure 44.19 A vector model showing possible orientations of the nuclear spin angular momentum vector and its projections along the z axis for the case $I = \frac{3}{2}$.

Nuclear spin has an associated nuclear magnetic moment, similar to that of the electron. The spin magnetic moment of a nucleus is measured in terms of the **nuclear magneton** μ_n , a unit of moment defined as

Nuclear magneton ►

$$\mu_n \equiv \frac{e\hbar}{2m_p} = 5.05 \times 10^{-27} \text{ J/T} \quad (44.31)$$

where m_p is the mass of the proton. This definition is analogous to that of the Bohr magneton μ_B , which corresponds to the spin magnetic moment of a free electron (see Section 42.6). Note that μ_n is smaller than μ_B ($= 9.274 \times 10^{-24} \text{ J/T}$) by a factor of 1 836 because of the large difference between the proton mass and the electron mass.

The magnetic moment of a free proton is $2.792 8\mu_n$. Unfortunately, there is no general theory of nuclear magnetism that explains this value. The neutron also has a magnetic moment, which has a value of $-1.913 5\mu_n$. The negative sign indicates that this moment is opposite the spin angular momentum of the neutron. The existence of a magnetic moment for the neutron is surprising in view of the neutron being uncharged. That suggests that the neutron is not a fundamental particle but rather has an underlying structure consisting of charged constituents. We shall explore this structure in Chapter 46.

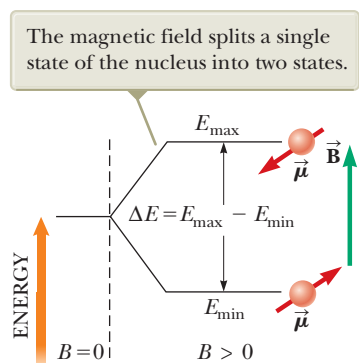


Figure 44.20 A nucleus with spin $\frac{1}{2}$ is placed in a magnetic field.

The potential energy associated with a magnetic dipole moment $\vec{\mu}$ in an external magnetic field \vec{B} is given by $-\vec{\mu} \cdot \vec{B}$ (Eq. 29.18). When the magnetic moment $\vec{\mu}$ is lined up with the field as closely as quantum physics allows, the potential energy of the dipole–field system has its minimum value E_{\min} . When $\vec{\mu}$ is as antiparallel to the field as possible, the potential energy has its maximum value E_{\max} . In general, there are other energy states between these values corresponding to the quantized directions of the magnetic moment with respect to the field. For a nucleus with spin $\frac{1}{2}$, there are only two allowed states, with energies E_{\min} and E_{\max} . These two energy states are shown in Figure 44.20.

It is possible to observe transitions between these two spin states using a technique called **NMR**, for **nuclear magnetic resonance**. A constant magnetic field (\vec{B} in Fig. 44.20) is introduced to define a z axis and split the energies of the spin states. A second, weaker, oscillating magnetic field is then applied perpendicular to \vec{B} , creating a cloud of radio-frequency photons around the sample. When the frequency of the oscillating field is adjusted so that the photon energy matches the energy difference between the spin states, there is a net absorption of photons by the nuclei that can be detected electronically.

Figure 44.21 is a simplified diagram of the apparatus used in nuclear magnetic resonance. The energy absorbed by the nuclei is supplied by the tunable oscillator producing the oscillating magnetic field. Nuclear magnetic resonance and a related technique called *electron spin resonance* are extremely important methods for studying nuclear and atomic systems and the ways in which these systems interact with their surroundings.

A widely used medical diagnostic technique called **MRI**, for **magnetic resonance imaging**, is based on nuclear magnetic resonance. Because nearly two-thirds of the atoms in the human body are hydrogen (which gives a strong NMR signal), MRI works exceptionally well for viewing internal tissues. The patient is placed inside a large solenoid that supplies a magnetic field that is constant in time but whose magnitude varies spatially across the body. Because of the variation in the field, hydrogen atoms in different parts of the body have different energy splittings between spin states, so the resonance signal can be used to provide information about the positions of the protons. A computer is used to analyze the position information to provide data for constructing a final image. Contrast in the final image among different types of tissues is created by computer analysis of the time intervals for the nuclei to return to the lower-energy spin state between pulses of radio-frequency photons. Contrast can be enhanced with the use of contrast agents such as gadolinium compounds or iron oxide nanoparticles taken orally or injected intravenously. An MRI scan showing incredible detail in internal body structure is shown in Figure 44.22.

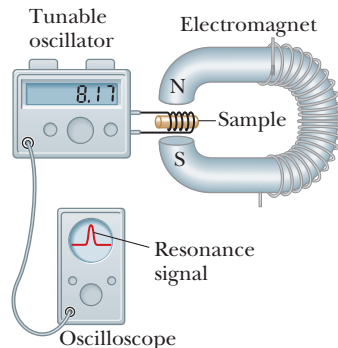
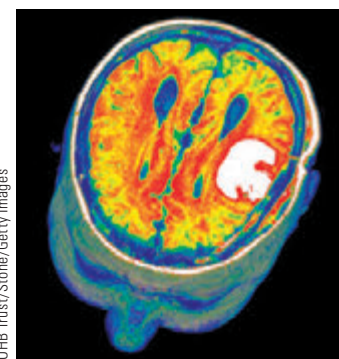


Figure 44.21 Experimental arrangement for nuclear magnetic resonance. The radio-frequency magnetic field created by the coil surrounding the sample and provided by the variable-frequency oscillator is perpendicular to the constant magnetic field created by the electromagnet. When the nuclei in the sample meet the resonance condition, the nuclei absorb energy from the radio-frequency field of the coil; this absorption changes the characteristics of the circuit in which the coil is included. Most modern NMR spectrometers use superconducting magnets at fixed field strengths and operate at frequencies of approximately 200 MHz.



UHB Trust/Stone/Getty Images

Figure 44.22 A color-enhanced MRI scan of a human brain, showing a tumor in white.

The main advantage of MRI over other imaging techniques is that it causes minimal cellular damage. The photons associated with the radio-frequency signals used in MRI have energies of only about 10^{-7} eV. Because molecular bond strengths are much larger (approximately 1 eV), the radio-frequency radiation causes little cellular damage. In comparison, x-rays have energies ranging from 10^4 to 10^6 eV and can cause considerable cellular damage. Therefore, despite some individuals' fears of the word *nuclear* associated with MRI, the radio-frequency radiation involved is overwhelmingly safer than the x-rays that these individuals might accept more readily. A disadvantage of MRI is that the equipment required to conduct the procedure is very expensive, so MRI images are costly.

The magnetic field produced by the solenoid is sufficient to lift a car, and the radio signal is about the same magnitude as that from a small commercial broadcasting station. Although MRI is inherently safe in normal use, the strong magnetic field of the solenoid requires diligent care to ensure that no ferromagnetic materials are located in the room near the MRI apparatus. Several accidents have occurred, such as a 2000 incident in which a gun pulled from a police officer's hand discharged upon striking the machine.

Summary

Definitions

A nucleus is represented by the symbol ${}^A_Z\text{X}$, where A is the **mass number** (the total number of nucleons) and Z is the **atomic number** (the total number of protons). The total number of neutrons in a nucleus is the **neutron number** N , where $A = N + Z$. Nuclei having the same Z value but different A and N values are **isotopes** of each other.

The magnetic moment of a nucleus is measured in terms of the **nuclear magneton** μ_n , where

$$\mu_n \equiv \frac{e\hbar}{2m_p} = 5.05 \times 10^{-27} \text{ J/T} \quad (44.31)$$

Concepts and Principles

Assuming nuclei are spherical, their radius is given by

$$r = aA^{1/3} \quad (44.1)$$

where $a = 1.2$ fm.

Nuclei are stable because of the **nuclear force** between nucleons. This short-range force dominates the Coulomb repulsive force at distances of less than about 2 fm and is independent of charge. Light stable nuclei have equal numbers of protons and neutrons. Heavy stable nuclei have more neutrons than protons. The most stable nuclei have Z and N values that are both even.

The difference between the sum of the masses of a group of separate nucleons and the mass of the compound nucleus containing these nucleons, when multiplied by c^2 , gives the **binding energy** E_b of the nucleus. The binding energy of a nucleus can be calculated in MeV using the expression

$$E_b = [ZM(\text{H}) + Nm_n - M({}^A_Z\text{X})] \times 931.494 \text{ MeV/u} \quad (44.2)$$

where $M(\text{H})$ is the atomic mass of the neutral hydrogen atom, $M({}^A_Z\text{X})$ represents the atomic mass of an atom of the isotope ${}^A_Z\text{X}$, and m_n is the mass of the neutron.

The **liquid-drop model** of nuclear structure treats the nucleons as molecules in a drop of liquid. The four main contributions influencing binding energy are the volume effect, the surface effect, the Coulomb repulsion effect, and the symmetry effect. Summing such contributions results in the **semiempirical binding-energy formula**:

$$E_b = C_1A - C_2A^{2/3} - C_3 \frac{Z(Z-1)}{A^{1/3}} - C_4 \frac{(N-Z)^2}{A} \quad (44.3)$$

The **shell model**, or **independent-particle model**, assumes each nucleon exists in a shell and can only have discrete energy values. The stability of certain nuclei can be explained with this model.

A radioactive substance decays by **alpha decay**, **beta decay**, or **gamma decay**. An alpha particle is the ${}^4\text{He}$ nucleus, a beta particle is either an electron (e^-) or a positron (e^+), and a gamma particle is a high-energy photon.

If a radioactive material contains N_0 radioactive nuclei at $t = 0$, the number N of nuclei remaining after a time t has elapsed is

$$N = N_0 e^{-\lambda t} \quad (44.6)$$

where λ is the **decay constant**, a number equal to the probability per second that a nucleus will decay. The **decay rate**, or **activity**, of a radioactive substance is


$$R = \left| \frac{dN}{dt} \right| = R_0 e^{-\lambda t} \quad (44.7)$$

where $R_0 = \lambda N_0$ is the activity at $t = 0$. The **half-life** $T_{1/2}$ is the time interval required for half of a given number of radioactive nuclei to decay, where

$$T_{1/2} = \frac{0.693}{\lambda} \quad (44.8)$$

In alpha decay, a helium nucleus is ejected from the parent nucleus with a discrete set of kinetic energies. A nucleus undergoing beta decay emits either an electron (e^-) and an antineutrino ($\bar{\nu}$) or a positron (e^+) and a neutrino (ν). The electron or positron is ejected with a continuous range of energies. In **electron capture**, the nucleus of an atom absorbs one of its own electrons and emits a neutrino. In gamma decay, a nucleus in an excited state decays to its ground state and emits a gamma ray.

Nuclear reactions can occur when a target nucleus X is bombarded by a particle a, resulting in a daughter nucleus Y and an outgoing particle b:



The mass-energy conversion in such a reaction, called the **reaction energy** Q , is

$$Q = (M_a + M_X - M_Y - M_b)c^2 \quad (44.29)$$

Objective Questions

1. denotes answer available in *Student Solutions Manual/Study Guide*

- In nuclear magnetic resonance, suppose we increase the value of the constant magnetic field. As a result, the frequency of the photons that are absorbed in a particular transition changes. How is the frequency of the photons absorbed related to the magnetic field? (a) The frequency is proportional to the square of the magnetic field. (b) The frequency is directly proportional to the magnetic field. (c) The frequency is independent of the magnetic field. (d) The frequency is inversely proportional to the magnetic field. (e) The frequency is proportional to the reciprocal of the square of the magnetic field.
- When the ${}^{95}_{36}\text{Kr}$ nucleus undergoes beta decay by emitting an electron and an antineutrino, does the daughter nucleus (Rb) contain (a) 58 neutrons and 37 protons, (b) 58 protons and 37 neutrons, (c) 54 neutrons and 41 protons, or (d) 55 neutrons and 40 protons?
- When ${}^{32}_{15}\text{P}$ decays to ${}^{32}_{16}\text{S}$, which of the following particles is emitted? (a) a proton (b) an alpha particle (c) an electron (d) a gamma ray (e) an antineutrino
- The half-life of radium-224 is about 3.6 days. What approximate fraction of a sample remains undecayed after two weeks? (a) $\frac{1}{2}$ (b) $\frac{1}{4}$ (c) $\frac{1}{8}$ (d) $\frac{1}{16}$ (e) $\frac{1}{32}$
- Two samples of the same radioactive nuclide are prepared. Sample G has twice the initial activity of sample H. (i) How does the half-life of G compare with the half-life of H? (a) It is two times larger. (b) It is the same. (c) It is half as large. (ii) After each has passed through five half-lives, how do their activities compare? (a) G has more than twice the activity of H. (b) G has twice the activity of H. (c) G and H have the same activity. (d) G has lower activity than H.
- If a radioactive nuclide ${}^A_Z\text{X}$ decays by emitting a gamma ray, what happens? (a) The resulting nuclide has a different Z value. (b) The resulting nuclide has the same A and Z values. (c) The resulting nuclide has a different A value. (d) Both A and Z decrease by one. (e) None of those statements is correct.
- Does a nucleus designated as ${}^{40}_{18}\text{X}$ contain (a) 20 neutrons and 20 protons, (b) 22 protons and 18 neutrons, (c) 18 protons and 22 neutrons, (d) 18 protons and 40 neutrons, or (e) 40 protons and 18 neutrons?
- When ${}^{144}_{60}\text{Nd}$ decays to ${}^{140}_{58}\text{Ce}$, identify the particle that is released. (a) a proton (b) an alpha particle (c) an electron (d) a neutron (e) a neutrino
- What is the Q value for the reaction ${}^9\text{Be} + \alpha \rightarrow {}^{12}\text{C} + n$? (a) 8.4 MeV (b) 7.3 MeV (c) 6.2 MeV (d) 5.7 MeV (e) 4.2 MeV
- (i) To predict the behavior of a nucleus in a fission reaction, which model would be more appropriate,

- (a) the liquid-drop model or (b) the shell model?
 (ii) Which model would be more successful in predicting the magnetic moment of a given nucleus? Choose from the same answers as in part (i).
 (iii) Which could better explain the gamma-ray spectrum of an excited nucleus? Choose from the same answers as in part (i).
11. A free neutron has a half-life of 614 s. It undergoes beta decay by emitting an electron. Can a free proton undergo a similar decay? (a) yes, the same decay (b) yes, but by emitting a positron (c) yes, but with a very different half-life (d) no
12. Which of the following quantities represents the reaction energy of a nuclear reaction? (a) (final mass – initial mass)/ c^2 (b) (initial mass – final mass)/ c^2 (c) (final mass – initial mass) c^2 (d) (initial mass – final mass) c^2 (e) none of those quantities
13. In the decay ${}^{234}_{90}\text{Th} \rightarrow {}^A_Z\text{Ra} + {}^4_2\text{He}$, identify the mass number and the atomic number of the Ra nucleus: (a) $A = 230, Z = 92$ (b) $A = 238, Z = 88$ (c) $A = 230, Z = 88$ (d) $A = 234, Z = 88$ (e) $A = 238, Z = 86$

Conceptual Questions

1. denotes answer available in *Student Solutions Manual/Study Guide*

1. If a nucleus such as ${}^{226}\text{Ra}$ initially at rest undergoes alpha decay, which has more kinetic energy after the decay, the alpha particle or the daughter nucleus? Explain your answer.
2. “If no more people were to be born, the law of population growth would strongly resemble the radioactive decay law.” Discuss this statement.
3. A student claims that a heavy form of hydrogen decays by alpha emission. How do you respond?
4. In beta decay, the energy of the electron or positron emitted from the nucleus lies somewhere in a relatively large range of possibilities. In alpha decay, however, the alpha-particle energy can only have discrete values. Explain this difference.
5. Can carbon-14 dating be used to measure the age of a rock? Explain.
6. In positron decay, a proton in the nucleus becomes a neutron and its positive charge is carried away by the positron. A neutron, though, has a larger rest energy than a proton. How is that possible?
7. (a) How many values of I_z are possible for $I = \frac{5}{2}$? (b) For $I = 3$?
8. Why do nearly all the naturally occurring isotopes lie above the $N = Z$ line in Figure 44.4?
9. Why are very heavy nuclei unstable?
10. Explain why nuclei that are well off the line of stability in Figure 44.4 tend to be unstable.
11. Consider two heavy nuclei X and Y having similar mass numbers. If X has the higher binding energy, which nucleus tends to be more unstable? Explain your answer.
12. What fraction of a radioactive sample has decayed after two half-lives have elapsed?
13. Figure CQ44.13 shows a watch from the early 20th century. The numbers and the hands of the watch are painted with a paint that contains a small amount of natural radium ${}^{226}\text{Ra}$ mixed with a phosphorescent material. The decay of the radium causes the phosphorescent material to glow continuously. The radioactive nuclide ${}^{226}\text{Ra}$ has a half-life of approximately 1.60×10^3 years. Being that the solar system is approximately 5 billion years old, why was this isotope still available in the 20th century for use on this watch?



Figure CQ44.13

14. Can a nucleus emit alpha particles that have different energies? Explain.
15. In Rutherford’s experiment, assume an alpha particle is headed directly toward the nucleus of an atom. Why doesn’t the alpha particle make physical contact with the nucleus?
16. Suppose it could be shown that the cosmic-ray intensity at the Earth’s surface was much greater 10 000 years ago. How would this difference affect what we accept as valid carbon-dated values of the age of ancient samples of once-living matter? Explain your answer.
17. Compare and contrast the properties of a photon and a neutrino.

Problems

ENHANCED

WebAssign

The problems found in this chapter may be assigned

online in Enhanced WebAssign

1. straightforward;
2. intermediate;
3. challenging

1. full solution available in the *Student Solutions Manual/Study Guide*

AMT

Analysis Model tutorial available in Enhanced WebAssign

GP

Guided Problem

M

Master It tutorial available in Enhanced WebAssign

W

Watch It video solution available in Enhanced WebAssign

Section 44.1 Some Properties of Nuclei

1. Find the nuclear radii of (a) ${}^2_1\text{H}$, (b) ${}^{60}_{27}\text{Co}$, (c) ${}^{197}_{79}\text{Au}$, and (d) ${}^{239}_{94}\text{Pu}$.
2. (a) Determine the mass number of a nucleus whose radius is approximately equal to two-thirds the radius of ${}^{230}_{88}\text{Ra}$. (b) Identify the element. (c) Are any other answers possible? Explain.
3. (a) Use energy methods to calculate the distance of closest approach for a head-on collision between an alpha particle having an initial energy of 0.500 MeV and a gold nucleus (${}^{197}\text{Au}$) at rest. Assume the gold nucleus remains at rest during the collision. (b) What minimum initial speed must the alpha particle have to approach as close as 300 fm to the gold nucleus?
4. (a) What is the order of magnitude of the number of protons in your body? (b) Of the number of neutrons? (c) Of the number of electrons?
5. Consider the ${}^{65}_{29}\text{Cu}$ nucleus. Find approximate values for its (a) radius, (b) volume, and (c) density.
6. Using $2.30 \times 10^{17} \text{ kg/m}^3$ as the density of nuclear matter, find the radius of a sphere of such matter that would have a mass equal to that of a baseball, 0.145 kg.
7. A star ending its life with a mass of four to eight times the Sun's mass is expected to collapse and then undergo a supernova event. In the remnant that is not carried away by the supernova explosion, protons and electrons combine to form a neutron star with approximately twice the mass of the Sun. Such a star can be thought of as a gigantic atomic nucleus. Assume $r = aA^{1/3}$ (Eq. 44.1). If a star of mass $3.98 \times 10^{30} \text{ kg}$ is composed entirely of neutrons ($m_n = 1.67 \times 10^{-27} \text{ kg}$), what would its radius be?
8. Figure P44.8 shows the potential energy for two protons as a function of separation distance. In the text, it was claimed that, to be visible on such a graph, the peak in the curve is exaggerated by a factor of ten. (a) Find the electric potential energy of a pair of protons separated by 4.00 fm. (b) Verify that the peak in Figure P44.8 is exaggerated by a factor of ten.

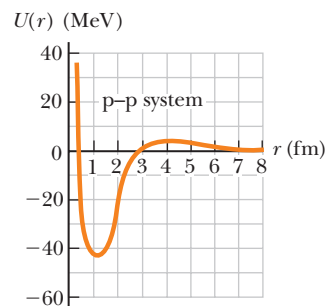


Figure P44.8

9. **Review.** Singly ionized carbon is accelerated through 1 000 V and passed into a mass spectrometer to determine the isotopes present (see Chapter 29). The magnitude of the magnetic field in the spectrometer is 0.200 T. The orbit radius for a ${}^{12}\text{C}$ isotope as it passes through the field is $r = 7.89 \text{ cm}$. Find the radius of the orbit of a ${}^{13}\text{C}$ isotope.
10. **Review.** Singly ionized carbon is accelerated through a potential difference ΔV and passed into a mass spectrometer to determine the isotopes present (see Chapter 29). The magnitude of the magnetic field in the spectrometer is B . The orbit radius for an isotope of mass m_1 as it passes through the field is r_1 . Find the radius of the orbit of an isotope of mass m_2 .
11. An alpha particle ($Z = 2$, mass = $6.64 \times 10^{-27} \text{ kg}$) approaches to within $1.00 \times 10^{-14} \text{ m}$ of a carbon nucleus ($Z = 6$). What are (a) the magnitude of the maximum Coulomb force on the alpha particle, (b) the magnitude of the acceleration of the alpha particle at the time of the maximum force, and (c) the potential energy of the system of the alpha particle and the carbon nucleus at this time?
12. In a Rutherford scattering experiment, alpha particles having kinetic energy of 7.70 MeV are fired toward a gold nucleus that remains at rest during the collision. The alpha particles come as close as 29.5 fm to the gold nucleus before turning around. (a) Calculate the de Broglie wavelength for the 7.70-MeV alpha particle and compare it with the distance of closest approach,

29.5 fm. (b) Based on this comparison, why is it proper to treat the alpha particle as a particle and not as a wave in the Rutherford scattering experiment?

13. **Review.** Two golf balls each have a 4.30-cm diameter and are 1.00 m apart. What would be the gravitational force exerted by each ball on the other if the balls were made of nuclear matter?
14. Assume a hydrogen atom is a sphere with diameter 0.100 nm and a hydrogen molecule consists of two such spheres in contact. (a) What fraction of the space in a tank of hydrogen gas at 0°C and 1.00 atm is occupied by the hydrogen molecules themselves? (b) What fraction of the space within one hydrogen atom is occupied by its nucleus, of radius 1.20 fm?

Section 44.2 Nuclear Binding Energy

15. Calculate the binding energy per nucleon for (a) ^2H , (b) ^4He , (c) ^{56}Fe , and (d) ^{238}U .
16. (a) Calculate the difference in binding energy per nucleon for the nuclei $^{23}_{11}\text{Na}$ and $^{23}_{12}\text{Mg}$. (b) How do you account for the difference?
17. A pair of nuclei for which $Z_1 = N_2$ and $Z_2 = N_1$ are called *mirror isobars* (the atomic and neutron numbers are interchanged). Binding-energy measurements on these nuclei can be used to obtain evidence of the charge independence of nuclear forces (that is, proton–proton, proton–neutron, and neutron–neutron nuclear forces are equal). Calculate the difference in binding energy for the two mirror isobars $^{15}_8\text{O}$ and $^{15}_7\text{N}$. The electric repulsion among eight protons rather than seven accounts for the difference.
18. The peak of the graph of nuclear binding energy per nucleon occurs near ^{56}Fe , which is why iron is prominent in the spectrum of the Sun and stars. Show that ^{56}Fe has a higher binding energy per nucleon than its neighbors ^{55}Mn and ^{59}Co .

19. Nuclei having the same mass numbers are called *isobars*. The isotope $^{139}_{57}\text{La}$ is stable. A radioactive isobar, $^{139}_{59}\text{Pr}$, is located below the line of stable nuclei as shown in Figure P44.19 and decays by e^+ emission. Another

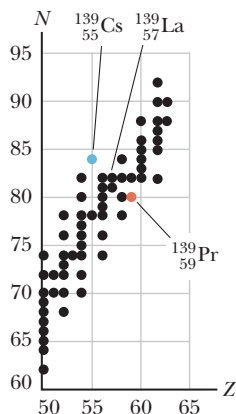


Figure P44.19

radioactive isobar of $^{139}_{57}\text{La}$, $^{139}_{55}\text{Cs}$, decays by e^- emission and is located above the line of stable nuclei in Figure P44.19. (a) Which of these three isobars has the highest neutron-to-proton ratio? (b) Which has the greatest binding energy per nucleon? (c) Which do you expect to be heavier, $^{139}_{59}\text{Pr}$ or $^{139}_{55}\text{Cs}$?

20. The energy required to construct a uniformly charged sphere of total charge Q and radius R is $U = 3k_e Q^2/5R$, where k_e is the Coulomb constant (see Problem 77). Assume a ^{40}Ca nucleus contains 20 protons uniformly distributed in a spherical volume. (a) How much energy is required to counter their electrical repulsion according to the above equation? (b) Calculate the binding energy of ^{40}Ca . (c) Explain what you can conclude from comparing the result of part (b) with that of part (a).
21. Calculate the minimum energy required to remove a neutron from the $^{43}_{20}\text{Ca}$ nucleus.

Section 44.3 Nuclear Models

22. Using the graph in Figure 44.5, estimate how much energy is released when a nucleus of mass number 200 fissions into two nuclei each of mass number 100.
23. (a) Use the semiempirical binding-energy formula (Eq. 44.3) to compute the binding energy for $^{56}_{26}\text{Fe}$. (b) What percentage is contributed to the binding energy by each of the four terms?
24. (a) In the liquid-drop model of nuclear structure, why does the surface-effect term $-C_2 A^{2/3}$ have a negative sign? (b) **What If?** The binding energy of the nucleus increases as the volume-to-surface area ratio increases. Calculate this ratio for both spherical and cubical shapes and explain which is more plausible for nuclei.

Section 44.4 Radioactivity

25. What time interval is required for the activity of a sample of the radioactive isotope $^{72}_{33}\text{As}$ to decrease by 90.0% from its original value? The half-life of $^{72}_{33}\text{As}$ is 26 h.
26. A freshly prepared sample of a certain radioactive isotope has an activity of 10.0 mCi. After 4.00 h, its activity is 8.00 mCi. Find (a) the decay constant and (b) the half-life. (c) How many atoms of the isotope were contained in the freshly prepared sample? (d) What is the sample's activity 30.0 h after it is prepared?
27. A sample of radioactive material contains 1.00×10^{15} atoms and has an activity of 6.00×10^{11} Bq. What is its half-life?
28. From the equation expressing the law of radioactive decay, derive the following useful expressions for the decay constant and the half-life, in terms of the time interval Δt during which the decay rate decreases from R_0 to R :

$$\lambda = \frac{1}{\Delta t} \ln \left(\frac{R_0}{R} \right) \quad T_{1/2} = \frac{(\ln 2) \Delta t}{\ln (R_0/R)}$$

- 29.** The radioactive isotope ^{198}Au has a half-life of 64.8 h. **M** A sample containing this isotope has an initial activity ($t = 0$) of $40.0 \mu\text{Ci}$. Calculate the number of nuclei that decay in the time interval between $t_1 = 10.0 \text{ h}$ and $t_2 = 12.0 \text{ h}$.

- 30.** A radioactive nucleus has half-life $T_{1/2}$. A sample containing these nuclei has initial activity R_0 at $t = 0$. Calculate the number of nuclei that decay during the interval between the later times t_1 and t_2 .

- 31.** The half-life of ^{131}I is 8.04 days. (a) Calculate the decay constant for this nuclide. (b) Find the number of ^{131}I nuclei necessary to produce a sample with an activity of 6.40 mCi . (c) A sample of ^{131}I with this initial activity decays for 40.2 d. What is the activity at the end of that period?

- 32.** Tritium has a half-life of 12.33 years. What fraction of the nuclei in a tritium sample will remain (a) after 5.00 yr? (b) After 10.0 yr? (c) After 123.3 yr? (d) According to Equation 44.6, an infinite amount of time is required for the entire sample to decay. Discuss whether that is realistic.

- 33.** Consider a radioactive sample. Determine the ratio of the number of nuclei decaying during the first half of its half-life to the number of nuclei decaying during the second half of its half-life.

- 34.** (a) The daughter nucleus formed in radioactive decay is often radioactive. Let N_{10} represent the number of parent nuclei at time $t = 0$, $N_1(t)$ the number of parent nuclei at time t , and λ_1 the decay constant of the parent. Suppose the number of daughter nuclei at time $t = 0$ is zero. Let $N_2(t)$ be the number of daughter nuclei at time t and let λ_2 be the decay constant of the daughter. Show that $N_2(t)$ satisfies the differential equation

$$\frac{dN_2}{dt} = \lambda_1 N_1 - \lambda_2 N_2$$

- (b) Verify by substitution that this differential equation has the solution

$$N_2(t) = \frac{N_{10}\lambda_1}{\lambda_1 - \lambda_2} (e^{-\lambda_2 t} - e^{-\lambda_1 t})$$

This equation is the law of successive radioactive decays.

- (c) ^{218}Po decays into ^{214}Pb with a half-life of 3.10 min, and ^{214}Pb decays into ^{214}Bi with a half-life of 26.8 min. On the same axes, plot graphs of $N_1(t)$ for ^{218}Po and $N_2(t)$ for ^{214}Pb . Let $N_{10} = 1000$ nuclei and choose values of t from 0 to 36 min in 2-min intervals. (d) The curve for ^{214}Pb obtained in part (c) at first rises to a maximum and then starts to decay. At what instant t_m is the number of ^{214}Pb nuclei a maximum? (e) By applying the condition for a maximum $dN_2/dt = 0$, derive a symbolic equation for t_m in terms of λ_1 and λ_2 . (f) Explain whether the value obtained in part (c) agrees with this equation.

Section 44.5 The Decay Processes

- 35.** Determine which decays can occur spontaneously.
 (a) $^{40}_{20}\text{Ca} \rightarrow e^+ + ^{40}_{19}\text{K}$ (b) $^{98}_{44}\text{Ru} \rightarrow ^4_2\text{He} + ^{94}_{42}\text{Mo}$
 (c) $^{144}_{60}\text{Nd} \rightarrow ^4_2\text{He} + ^{140}_{58}\text{Ce}$

- 36.** A ^3H nucleus beta decays into ^3He by creating an electron and an antineutrino according to the reaction




Determine the total energy released in this decay.

- 37.** The ^{14}C isotope undergoes beta decay according to the process given by Equation 44.21. Find the Q value for this process.

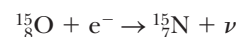
- 38.** Identify the unknown nuclide or particle (X).
 (a) $X \rightarrow ^{65}_{28}\text{Ni} + \gamma$ (b) $^{215}_{84}\text{Po} \rightarrow X + \alpha$
 (c) $X \rightarrow ^{55}_{26}\text{Fe} + e^+ + \nu$

- 39.** Find the energy released in the alpha decay



- 40.** A sample consists of 1.00×10^6 radioactive nuclei with a half-life of 10.0 h. No other nuclei are present at time $t = 0$. The stable daughter nuclei accumulate in the sample as time goes on. (a) Derive an equation giving the number of daughter nuclei N_d as a function of time. (b) Sketch or describe a graph of the number of daughter nuclei as a function of time. (c) What are the maximum and minimum numbers of daughter nuclei, and when do they occur? (d) What are the maximum and minimum rates of change in the number of daughter nuclei, and when do they occur?

- 41.** The nucleus $^{15}_8\text{O}$ decays by electron capture. The nuclear reaction is written



- (a) Write the process going on for a single particle within the nucleus. (b) Disregarding the daughter's recoil, determine the energy of the neutrino.

- 42.** A living specimen in equilibrium with the atmosphere **GP** contains one atom of ^{14}C (half-life = 5730 yr) for every **W** 7.70×10^{11} stable carbon atoms. An archeological sample of wood (cellulose, $\text{C}_{12}\text{H}_{22}\text{O}_{11}$) contains 21.0 mg of carbon. When the sample is placed inside a shielded beta counter with 88.0% counting efficiency, 837 counts are accumulated in one week. We wish to find the age of the sample. (a) Find the number of carbon atoms in the sample. (b) Find the number of carbon-14 atoms in the sample. (c) Find the decay constant for carbon-14 in inverse seconds. (d) Find the initial number of decays per week just after the specimen died. (e) Find the corrected number of decays per week from the current sample. (f) From the answers to parts (d) and (e), find the time interval in years since the specimen died.

Section 44.6 Natural Radioactivity

- 43.** Uranium is naturally present in rock and soil. At one step in its series of radioactive decays, ^{238}U produces the chemically inert gas radon-222, with a half-life of 3.82 days. The radon seeps out of the ground to mix into the atmosphere, typically making open air radioactive with activity 0.3 pCi/L . In homes, ^{222}Rn can be a serious pollutant, accumulating to reach much higher

activities in enclosed spaces, sometimes reaching 4.00 pCi/L. If the radon radioactivity exceeds 4.00 pCi/L, the U.S. Environmental Protection Agency suggests taking action to reduce it such as by reducing infiltration of air from the ground. (a) Convert the activity 4.00 pCi/L to units of becquerels per cubic meter. (b) How many ^{222}Rn atoms are in 1 m^3 of air displaying this activity? (c) What fraction of the mass of the air does the radon constitute?

44. The most common isotope of radon is ^{222}Rn , which has half-life 3.82 days. (a) What fraction of the nuclei that were on the Earth one week ago are now undecayed? (b) Of those that existed one year ago? (c) In view of these results, explain why radon remains a problem, contributing significantly to our background radiation exposure.

45. Enter the correct nuclide symbol in each open tan rectangle in Figure P44.45, which shows the sequences of decays in the natural radioactive series starting with the long-lived isotope uranium-235 and ending with the stable nucleus lead-207.

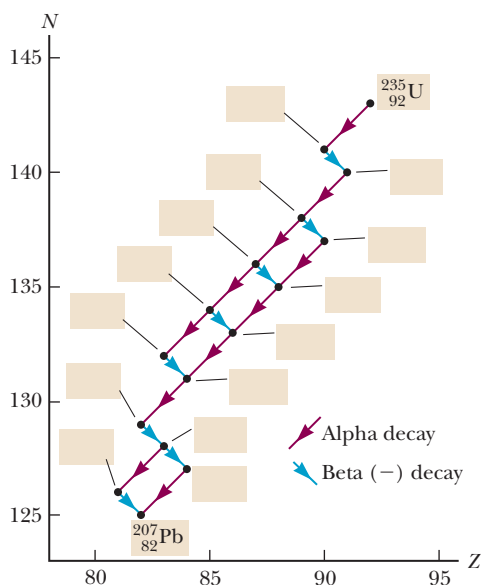



Figure P44.45

46. A rock sample contains traces of ^{238}U , ^{235}U , ^{232}Th , ^{208}Pb , ^{207}Pb , and ^{206}Pb . Analysis shows that the ratio of the amount of ^{238}U to ^{206}Pb is 1.164. (a) Assuming the rock originally contained no lead, determine the age of the rock. (b) What should be the ratios of ^{235}U to ^{207}Pb and of ^{232}Th to ^{208}Pb so that they would yield the same age for the rock? Ignore the minute amounts of the intermediate decay products in the decay chains. *Note:* This form of multiple dating gives reliable geological dates.

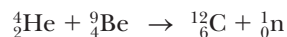
Section 44.7 Nuclear Reactions

47. A beam of 6.61-MeV protons is incident on a target of $^{27}_{13}\text{Al}$. Those that collide produce the reaction




Ignoring any recoil of the product nucleus, determine the kinetic energy of the emerging neutrons.

48. (a) One method of producing neutrons for experimental use is bombardment of light nuclei with alpha particles. In the method used by James Chadwick in 1932, alpha particles emitted by polonium are incident on beryllium nuclei:



What is the Q value of this reaction? (b) Neutrons are also often produced by small-particle accelerators. In one design, deuterons accelerated in a Van de Graaff generator bombard other deuterium nuclei and cause the reaction

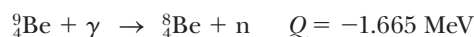
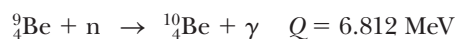


Calculate the Q value of the reaction. (c) Is the reaction in part (b) exothermic or endothermic?

49. Identify the unknown nuclides and particles X and X' in the nuclear reactions (a) $X + {}^4_2\text{He} \rightarrow {}^{24}_{12}\text{Mg} + {}^1_0\text{n}$, (b) ${}^{235}_{92}\text{U} + {}^1_0\text{n} \rightarrow {}^{90}_{38}\text{Sr} + X + 2({}^1_0\text{n})$, and (c) $2({}^1_1\text{H}) \rightarrow {}^2_1\text{H} + X + X'$.

50. Natural gold has only one isotope, $^{197}_{79}\text{Au}$. If natural gold is irradiated by a flux of slow neutrons, electrons are emitted. (a) Write the reaction equation. (b) Calculate the maximum energy of the emitted electrons.

51. The following reactions are observed:



Calculate the masses of ${}^8\text{Be}$ and ${}^{10}\text{Be}$ in unified mass units to four decimal places from these data.

Section 44.8 Nuclear Magnetic Resonance and Magnetic Resonance Imaging

52. Construct a diagram like that of Figure 44.19 for the cases when I equals (a) $\frac{5}{2}$ and (b) 4.

53. The radio frequency at which a nucleus having a magnetic moment of magnitude μ displays resonance absorption between spin states is called the Larmor frequency and is given by

$$f = \frac{\Delta E}{h} = \frac{2\mu B}{h}$$

Calculate the Larmor frequency for (a) free neutrons in a magnetic field of 1.00 T, (b) free protons in a magnetic field of 1.00 T, and (c) free protons in the Earth's magnetic field at a location where the magnitude of the field is $50.0\ \mu\text{T}$.

Additional Problems

54. A wooden artifact is found in an ancient tomb. Its carbon-14 ($^{14}_6\text{C}$) activity is measured to be 60.0% of that in a fresh sample of wood from the same region.

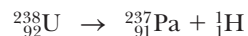
Assuming the same amount of ^{14}C was initially present in the artifact as is now contained in the fresh sample, determine the age of the artifact.

- 55.** A 200.0-mCi sample of a radioactive isotope is purchased by a medical supply house. If the sample has a half-life of 14.0 days, how long will it be before its activity is reduced to 20.0 mCi?
- M** **56.** Why is the following situation impossible? A ^{10}B nucleus is struck by an incoming alpha particle. As a result, a proton and a ^{12}C nucleus leave the site after the reaction.
- 57.** (a) Find the radius of the $^{12}_6\text{C}$ nucleus. (b) Find the force of repulsion between a proton at the surface of a $^{12}_6\text{C}$ nucleus and the remaining five protons. (c) How much work (in MeV) has to be done to overcome this electric repulsion in transporting the last proton from a large distance up to the surface of the nucleus? (d) Repeat parts (a), (b), and (c) for $^{238}_{92}\text{U}$.
- 58.** (a) Why is the beta decay $p \rightarrow n + e^+ + \nu$ forbidden for a free proton? (b) **What If?** Why is the same reaction possible if the proton is bound in a nucleus? For example, the following reaction occurs:



(c) How much energy is released in the reaction given in part (b)?

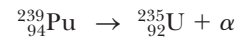
- 59. Review.** Consider the Bohr model of the hydrogen atom, with the electron in the ground state. The magnetic field at the nucleus produced by the orbiting electron has a value of 12.5 T. (See Problem 6 in Chapter 30.) The proton can have its magnetic moment aligned in either of two directions perpendicular to the plane of the electron's orbit. The interaction of the proton's magnetic moment with the electron's magnetic field causes a difference in energy between the states with the two different orientations of the proton's magnetic moment. Find that energy difference in electron volts.
- 60.** Show that the ^{238}U isotope cannot spontaneously emit a proton by analyzing the hypothetical process



Note: The ^{237}Pa isotope has a mass of 237.051 144 u.

- 61. Review.** (a) Is the mass of a hydrogen atom in its ground state larger or smaller than the sum of the masses of a proton and an electron? (b) What is the mass difference? (c) How large is the difference as a percentage of the total mass? (d) Is it large enough to affect the value of the atomic mass listed to six decimal places in Table 44.2?
- 62.** Why is the following situation impossible? In an effort to study positronium, a scientist places ^{57}Co and ^{14}C in proximity. The ^{57}Co nuclei decay by e^+ emission, and the ^{14}C nuclei decay by e^- emission. Some of the positrons and electrons from these decays combine to form sufficient amounts of positronium for the scientist to gather data.

- 63.** A by-product of some fission reactors is the isotope $^{239}_{94}\text{Pu}$, an alpha emitter having a half-life of 24 120 yr:



Consider a sample of 1.00 kg of pure $^{239}_{94}\text{Pu}$ at $t = 0$. Calculate (a) the number of $^{239}_{94}\text{Pu}$ nuclei present at $t = 0$ and (b) the initial activity in the sample. (c) **What If?** For what time interval does the sample have to be stored if a "safe" activity level is 0.100 Bq?

- 64.** After the sudden release of radioactivity from the Chernobyl nuclear reactor accident in 1986, the radioactivity of milk in Poland rose to 2 000 Bq/L due to iodine-131 present in the grass eaten by dairy cattle. Radioactive iodine, with half-life 8.04 days, is particularly hazardous because the thyroid gland concentrates iodine. The Chernobyl accident caused a measurable increase in thyroid cancers among children in Poland and many other Eastern European countries. (a) For comparison, find the activity of milk due to potassium. Assume 1.00 liter of milk contains 2.00 g of potassium, of which 0.011 7% is the isotope ^{40}K with half-life 1.28×10^9 yr. (b) After what elapsed time would the activity due to iodine fall below that due to potassium?
- 65.** A theory of nuclear astrophysics proposes that all the elements heavier than iron are formed in supernova explosions ending the lives of massive stars. Assume equal amounts of ^{235}U and ^{238}U were created at the time of the explosion and the present $^{235}\text{U}/^{238}\text{U}$ ratio on the Earth is 0.007 25. The half-lives of ^{235}U and ^{238}U are 0.704×10^9 yr and 4.47×10^9 yr, respectively. How long ago did the star(s) explode that released the elements that formed the Earth?
- 66.** The activity of a radioactive sample was measured over 12 h, with the net count rates shown in the accompanying table. (a) Plot the logarithm of the counting rate as a function of time. (b) Determine the decay constant and half-life of the radioactive nuclei in the sample. (c) What counting rate would you expect for the sample at $t = 0$? (d) Assuming the efficiency of the counting instrument is 10.0%, calculate the number of radioactive atoms in the sample at $t = 0$.

Time (h)	Counting Rate (counts/min)
1.00	3 100
2.00	2 450
4.00	1 480
6.00	910
8.00	545
10.0	330
12.0	200

- 67.** When, after a reaction or disturbance of any kind, a nucleus is left in an excited state, it can return to its normal (ground) state by emission of a gamma-ray photon (or several photons). This process is illustrated by Equation 44.25. The emitting nucleus must recoil to

conserve both energy and momentum. (a) Show that the recoil energy of the nucleus is

$$E_r = \frac{(\Delta E)^2}{2Mc^2}$$

where ΔE is the difference in energy between the excited and ground states of a nucleus of mass M . (b) Calculate the recoil energy of the ^{57}Fe nucleus when it decays by gamma emission from the 14.4-keV excited state. For this calculation, take the mass to be 57 u. *Suggestion:* Assume $hf \ll Mc^2$.

68. In a piece of rock from the Moon, the ^{87}Rb content is assayed to be 1.82×10^{10} atoms per gram of material and the ^{87}Sr content is found to be 1.07×10^9 atoms per gram. The relevant decay relating these nuclides is $^{87}\text{Rb} \rightarrow ^{87}\text{Sr} + e^- + \bar{\nu}$. The half-life of the decay is 4.75×10^{10} yr. (a) Calculate the age of the rock. (b) **What If?** Could the material in the rock actually be much older? What assumption is implicit in using the radioactive dating method?

69. Free neutrons have a characteristic half-life of 10.4 min.

AMT What fraction of a group of free neutrons with kinetic energy 0.040 eV decays before traveling a distance of 10.0 km?

70. On July 4, 1054, a brilliant light appeared in the constellation Taurus the Bull. The supernova, which could be seen in daylight for some days, was recorded by Arab and Chinese astronomers. As it faded, it remained visible for years, dimming for a time with the 77.1-day half-life of the radioactive cobalt-56 that had been created in the explosion. (a) The remains of the star now form the Crab nebula (see the photograph opening Chapter 34). In it, the cobalt-56 has now decreased to what fraction of its original activity? (b) Suppose that an American, of the people called the Anasazi, made a charcoal drawing of the supernova. The carbon-14 in the charcoal has now decayed to what fraction of its original activity?

71. When a nucleus decays, it can leave the daughter nucleus in an excited state. The $^{93}_{43}\text{Tc}$ nucleus (molar mass 92.910 2 g/mol) in the ground state decays by electron capture and e^+ emission to energy levels of the daughter (molar mass 92.906 8 g/mol in the ground state) at 2.44 MeV, 2.03 MeV, 1.48 MeV, and 1.35 MeV. (a) Identify the daughter nuclide. (b) To which of the listed levels of the daughter are electron capture and e^+ decay of $^{93}_{43}\text{Tc}$ allowed?

72. The radioactive isotope ^{137}Ba has a relatively short half-life and can be easily extracted from a solution containing its parent ^{137}Cs . This barium isotope is commonly used in an undergraduate laboratory exercise for demonstrating the radioactive decay law. Undergraduate students using modest experimental equipment took the data presented in Figure P44.72. Determine the half-life for the decay of ^{137}Ba using their data.

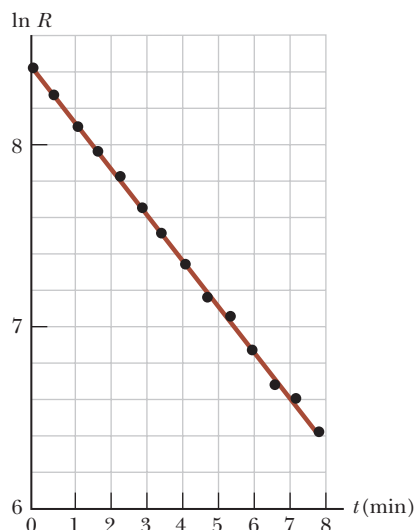


Figure P44.72

73. As part of his discovery of the neutron in 1932, James Chadwick determined the mass of the newly identified particle by firing a beam of fast neutrons, all having the same speed, at two different targets and measuring the maximum recoil speeds of the target nuclei. The maximum speeds arise when an elastic head-on collision occurs between a neutron and a stationary target nucleus. (a) Represent the masses and final speeds of the two target nuclei as m_1 , v_1 , m_2 , and v_2 and assume Newtonian mechanics applies. Show that the neutron mass can be calculated from the equation

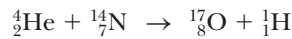
$$m_n = \frac{m_1 v_1 - m_2 v_2}{v_2 - v_1}$$

(b) Chadwick directed a beam of neutrons (produced from a nuclear reaction) on paraffin, which contains hydrogen. The maximum speed of the protons ejected was found to be 3.30×10^7 m/s. Because the velocity of the neutrons could not be determined directly, a second experiment was performed using neutrons from the same source and nitrogen nuclei as the target. The maximum recoil speed of the nitrogen nuclei was found to be 4.70×10^6 m/s. The masses of a proton and a nitrogen nucleus were taken as 1.00 u and 14.0 u, respectively. What was Chadwick's value for the neutron mass?

74. When the nuclear reaction represented by Equation 44.28 is endothermic, the reaction energy Q is negative. For the reaction to proceed, the incoming particle must have a minimum energy called the threshold energy, E_{th} . Some fraction of the energy of the incident particle is transferred to the compound nucleus to conserve momentum. Therefore, E_{th} must be greater than Q . (a) Show that

$$E_{\text{th}} = -Q \left(1 + \frac{M_a}{M_X} \right)$$

(b) Calculate the threshold energy of the incident alpha particle in the reaction



75. In an experiment on the transport of nutrients in a plant's root structure, two radioactive nuclides X and Y are used. Initially, 2.50 times more nuclei of type X are present than of type Y. At a time 3.00 d later, there are 4.20 times more nuclei of type X than of type Y. Isotope Y has a half-life of 1.60 d. What is the half-life of isotope X?
76. In an experiment on the transport of nutrients in a plant's root structure, two radioactive nuclides X and Y are used. Initially, the ratio of the number of nuclei of type X present to that of type Y is r_1 . After a time interval Δt , the ratio of the number of nuclei of type X present to that of type Y is r_2 . Isotope Y has a half-life of T_Y . What is the half-life of isotope X?

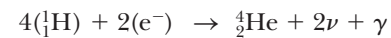
Challenge Problems

77. **Review.** Consider a model of the nucleus in which the positive charge (Ze) is uniformly distributed throughout a sphere of radius R . By integrating the energy density $\frac{1}{2}\epsilon_0 E^2$ over all space, show that the electric potential energy may be written

$$U = \frac{3Z^2e^2}{20\pi\epsilon_0 R} = \frac{3k_e Z^2 e^2}{5R}$$

Problem 72 in Chapter 25 derived the same result by a different method.

78. After determining that the Sun has existed for hundreds of millions of years, but before the discovery of nuclear physics, scientists could not explain why the Sun has continued to burn for such a long time interval. For example, if it were a coal fire, it would have burned up in about 3 000 yr. Assume the Sun, whose mass is equal to 1.99×10^{30} kg, originally consisted entirely of hydrogen and its total power output is 3.85×10^{26} W. (a) Assuming the energy-generating mechanism of the Sun is the fusion of hydrogen into helium via the net reaction



calculate the energy (in joules) given off by this reaction. (b) Take the mass of one hydrogen atom to be equal to 1.67×10^{-27} kg. Determine how many hydrogen atoms constitute the Sun. (c) If the total power output remains constant, after what time interval will all the hydrogen be converted into helium, making the Sun die? (d) How does your answer to part (c) compare with current estimates of the expected life of the Sun, which are 4 billion to 7 billion years?

Applications of Nuclear Physics

- 45.1 Interactions Involving Neutrons
- 45.2 Nuclear Fission
- 45.3 Nuclear Reactors
- 45.4 Nuclear Fusion
- 45.5 Radiation Damage
- 45.6 Uses of Radiation



In this chapter, we study both nuclear fission and nuclear fusion. The structure above is the target assembly for the inertial confinement procedure for initiating fusion by laser at the National Ignition Facility in Livermore, California. The triangle-shaped shrouds protect the fuel pellets and then open a few seconds before very powerful lasers bombard the target. (Courtesy of Lawrence Livermore National Library)

In this chapter, we study two means for deriving energy from nuclear reactions: fission, in which a large nucleus splits into two smaller nuclei, and fusion, in which two small nuclei fuse to form a larger one. In both cases, the released energy can be used either constructively (as in electric power plants) or destructively (as in nuclear weapons). We also examine the ways in which radiation interacts with matter and discuss the structure of fission and fusion reactors. The chapter concludes with a discussion of some industrial and biological applications of radiation.

45.1 Interactions Involving Neutrons

Nuclear fission is the process that occurs in present-day nuclear reactors and ultimately results in energy supplied to a community by electrical transmission. Nuclear fusion is an area of active research, but it has not yet been commercially developed for the supply of energy. We will discuss fission first and then explore fusion in Section 45.4.

To understand nuclear fission and the physics of nuclear reactors, we must first understand how neutrons interact with nuclei. Because of their charge neutrality, neutrons are not subject to Coulomb forces and as a result do not interact electri-

cally with electrons or the nucleus. Therefore, neutrons can easily penetrate deep into an atom and collide with the nucleus.

A fast neutron (energy greater than approximately 1 MeV) traveling through matter undergoes many collisions with nuclei, giving up some of its kinetic energy in each collision. For fast neutrons in some materials, elastic collisions dominate. Materials for which that occurs are called **moderators** because they slow down (or moderate) the originally energetic neutrons very effectively. Moderator nuclei should be of low mass so that a large amount of kinetic energy is transferred to them when struck by neutrons. For this reason, materials that are abundant in hydrogen, such as paraffin and water, are good moderators for neutrons.

Eventually, most neutrons bombarding a moderator become **thermal neutrons**, which means they have given up so much of their energy that they are in thermal equilibrium with the moderator material. Their average kinetic energy at room temperature is, from Equation 21.19,

$$K_{\text{avg}} = \frac{3}{2}k_{\text{B}}T \approx \frac{3}{2}(1.38 \times 10^{-23} \text{ J/K})(300 \text{ K}) = 6.21 \times 10^{-21} \text{ J} \approx 0.04 \text{ eV}$$

which corresponds to a neutron root-mean-square speed of approximately 2 800 m/s. Thermal neutrons have a distribution of speeds, just as the molecules in a container of gas do (see Chapter 21). High-energy neutrons, those with energy of several MeV, *thermalize* (that is, their average energy reaches K_{avg}) in less than 1 ms when they are incident on a moderator.

Once the neutrons have thermalized and the energy of a particular neutron is sufficiently low, there is a high probability the neutron will be captured by a nucleus, an event that is accompanied by the emission of a gamma ray. This **neutron capture** reaction can be written



Once the neutron is captured, the nucleus ${}_Z^{A+1}\text{X}^*$ is in an excited state for a very short time before it undergoes gamma decay. The product nucleus ${}_Z^{A+1}\text{X}$ is usually radioactive and decays by beta emission.

The neutron-capture rate for neutrons passing through any sample depends on the type of atoms in the sample and on the energy of the incident neutrons. The interaction of neutrons with matter increases with decreasing neutron energy because a slow neutron spends a larger time interval in the vicinity of target nuclei.

45.2 Nuclear Fission

As mentioned in Section 44.2, nuclear **fission** occurs when a heavy nucleus, such as ${}^{235}\text{U}$, splits into two smaller nuclei. Fission is initiated when a heavy nucleus captures a thermal neutron as described by the first step in Equation 45.1. The absorption of the neutron creates a nucleus that is unstable and can change to a lower-energy configuration by splitting into two smaller nuclei. In such a reaction, the combined mass of the daughter nuclei is less than the mass of the parent nucleus, and the difference in mass is called the **mass defect**. Multiplying the mass defect by c^2 gives the numerical value of the released energy. This energy is in the form of kinetic energy associated with the motion of the neutrons and the daughter nuclei after the fission event. Energy is released because the binding energy per nucleon of the daughter nuclei is approximately 1 MeV greater than that of the parent nucleus (see Fig. 44.5).

Nuclear fission was first observed in 1938 by Otto Hahn (1879–1968) and Fritz Strassmann (1902–1980) following some basic studies by Fermi. After bombarding uranium with neutrons, Hahn and Strassmann discovered among the reaction products two medium-mass elements, barium and lanthanum. Shortly thereafter, Lise Meitner (1878–1968) and her nephew Otto Frisch (1904–1979) explained what had happened. After absorbing a neutron, the uranium nucleus had split into two

◀ Neutron capture reaction

Pitfall Prevention 45.1

Binding Energy Reminder Remember from Chapter 44 that binding energy is the absolute value of the system energy and is related to the system mass. Therefore, when considering Figure 44.5, imagine flipping it upside down for a graph representing system mass. In a fission reaction, the system mass decreases. This decrease in mass appears in the system as kinetic energy of the fission products.

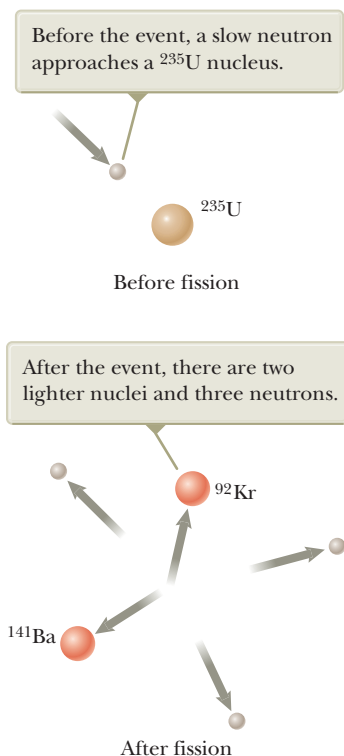


Figure 45.1 A nuclear fission event.

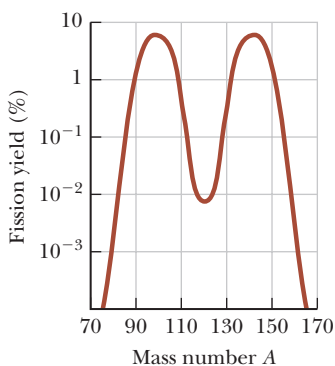
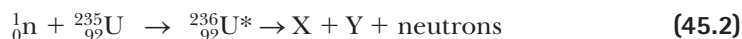


Figure 45.2 Distribution of fission products versus mass number for the fission of ^{235}U bombarded with thermal neutrons. Notice that the vertical axis is logarithmic.

nearly equal fragments plus several neutrons. Such an occurrence was of considerable interest to physicists attempting to understand the nucleus, but it was to have even more far-reaching consequences. Measurements showed that approximately 200 MeV of energy was released in each fission event, and this fact was to affect the course of history in World War II.

The fission of ^{235}U by thermal neutrons can be represented by the reaction



where ${}^{236}\text{U}^*$ is an intermediate excited state that lasts for approximately 10^{-12} s before splitting into medium-mass nuclei X and Y, which are called **fission fragments**. In any fission reaction, there are many combinations of X and Y that satisfy the requirements of conservation of energy and charge. In the case of uranium, for example, approximately 90 daughter nuclei can be formed.

Fission also results in the production of several neutrons, typically two or three. On average, approximately 2.5 neutrons are released per event. A typical fission reaction for uranium is

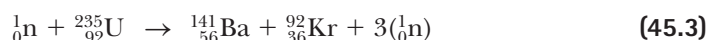


Figure 45.1 shows a pictorial representation of the fission event in Equation 45.3.

Figure 45.2 is a graph of the distribution of fission products versus mass number A . The most probable products have mass numbers $A \approx 95$ and $A \approx 140$. Suppose these products are ${}_{39}^{95}\text{Y}$ (with 56 neutrons) and ${}_{53}^{140}\text{I}$ (with 87 neutrons). If these nuclei are located on the graph of Figure 44.4, it is seen that both are well above the line of stability. Because these fragments are very unstable owing to their unusually high number of neutrons, they almost instantaneously release two or three neutrons.

Let's estimate the disintegration energy Q released in a typical fission process. From Figure 44.5, we see that the binding energy per nucleon is approximately 7.2 MeV for heavy nuclei ($A \approx 240$) and approximately 8.2 MeV for nuclei of intermediate mass. The amount of energy released is $8.2 \text{ MeV} - 7.2 \text{ MeV} = 1 \text{ MeV}$ per nucleon. Because there are a total of 235 nucleons in ${}^{235}\text{U}$, the energy released per fission event is approximately 235 MeV, a large amount of energy relative to the amount released in chemical processes. For example, the energy released in the combustion of one molecule of octane used in gasoline engines is about one-millionth of the energy released in a single fission event!

Quick Quiz 45.1 When a nucleus undergoes fission, the two daughter nuclei are generally radioactive. By which process are they most likely to decay? (a) alpha decay (b) beta decay (e^-) (c) beta decay (e^+)

Quick Quiz 45.2 Which of the following are possible fission reactions?

- (a) ${}_0^1\text{n} + {}_{92}^{235}\text{U} \rightarrow {}_{54}^{140}\text{Xe} + {}_{38}^{94}\text{Sr} + 2({}_0^1\text{n})$
- (b) ${}_0^1\text{n} + {}_{92}^{235}\text{U} \rightarrow {}_{50}^{132}\text{Sn} + {}_{42}^{101}\text{Mo} + 3({}_0^1\text{n})$
- (c) ${}_0^1\text{n} + {}_{94}^{239}\text{Pu} \rightarrow {}_{53}^{137}\text{I} + {}_{41}^{97}\text{Nb} + 3({}_0^1\text{n})$

Example 45.1 The Energy Released in the Fission of ^{235}U

Calculate the energy released when 1.00 kg of ^{235}U fissions, taking the disintegration energy per event to be $Q = 208 \text{ MeV}$.

SOLUTION

Conceptualize Imagine a nucleus of ^{235}U absorbing a neutron and then splitting into two smaller nuclei and several neutrons as in Figure 45.1.

45.1 continued

Categorize The problem statement tells us to categorize this example as one involving an energy analysis of nuclear fission.

Analyze Because $A = 235$ for uranium, one mole of this isotope has a mass of $M = 235$ g.

Find the number of nuclei in our sample in terms of the number of moles n and Avogadro's number, and then in terms of the sample mass m and the molar mass M of ^{235}U :

$$N = nN_A = \frac{m}{M} N_A$$

Find the total energy released when all nuclei undergo fission:

$$E = NQ = \frac{m}{M} N_A Q = \frac{1.00 \times 10^3 \text{ g}}{235 \text{ g/mol}} (6.02 \times 10^{23} \text{ mol}^{-1})(208 \text{ MeV})$$

$$= 5.33 \times 10^{26} \text{ MeV}$$

Finalize Convert this energy to kWh:

$$E = (5.33 \times 10^{26} \text{ MeV}) \left(\frac{1.60 \times 10^{-13} \text{ J}}{1 \text{ MeV}} \right) \left(\frac{1 \text{ kWh}}{3.60 \times 10^6 \text{ J}} \right) = 2.37 \times 10^7 \text{ kWh}$$

which, if released slowly, is enough energy to keep a 100-W lightbulb operating for 30 000 years! If the available fission energy in 1 kg of ^{235}U were suddenly released, it would be equivalent to detonating about 20 000 tons of TNT.

45.3 Nuclear Reactors

In Section 45.2, we learned that when ^{235}U fissions, one incoming neutron results in an average of 2.5 neutrons emitted per event. These neutrons can trigger other nuclei to fission. Because more neutrons are produced by the event than are absorbed, there is the possibility of an ever-building chain reaction (Fig. 45.3). Experience shows that if the chain reaction is not controlled (that is, if it does not

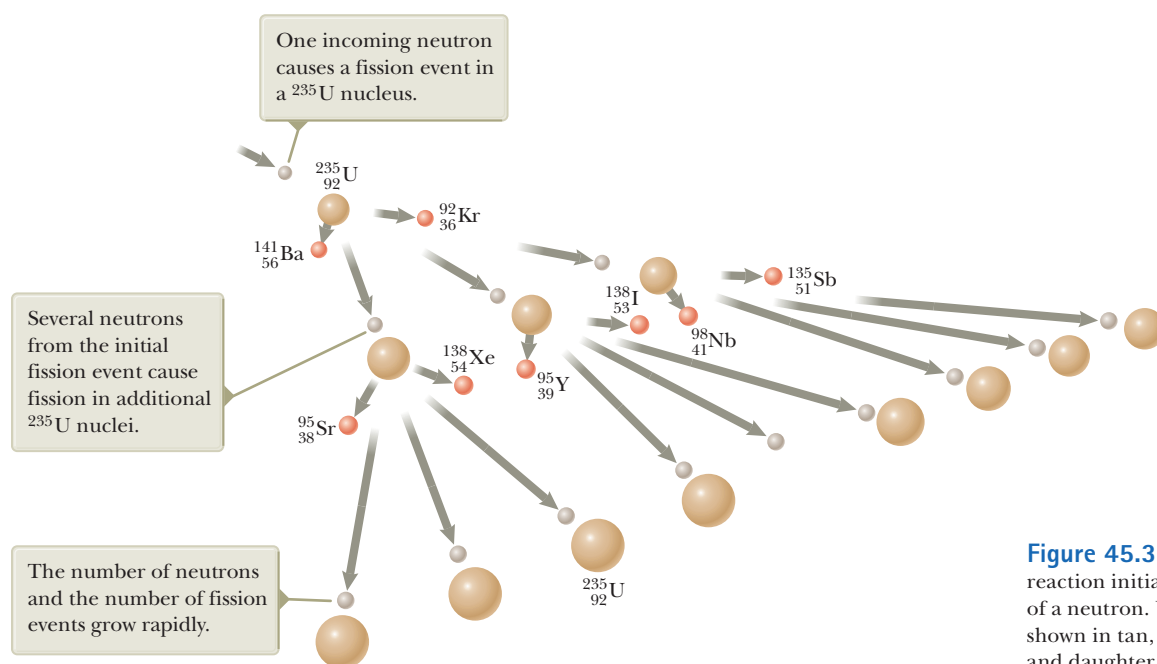


Figure 45.3 A nuclear chain reaction initiated by the capture of a neutron. Uranium nuclei are shown in tan, neutrons in gray, and daughter nuclei in orange.

Figure 45.4 Artist's rendition of the world's first nuclear reactor. Because of wartime secrecy, there are few photographs of the completed reactor, which was composed of layers of moderating graphite interspersed with uranium. A self-sustained chain reaction was first achieved on December 2, 1942. Word of the success was telephoned immediately to Washington, D.C., with this message: "The Italian navigator has landed in the New World and found the natives very friendly." The historic event took place in an improvised laboratory in the racquet court under the stands of the University of Chicago's Stagg Field, and the Italian navigator was Enrico Fermi.



Courtesy of Chicago Historical Society

proceed slowly), it can result in a violent explosion, with the sudden release of an enormous amount of energy. When the reaction is controlled, however, the energy released can be put to constructive use. In the United States, for example, nearly 20% of the electricity generated each year comes from nuclear power plants, and nuclear power is used extensively in many other countries, including France, Russia, and India.

A nuclear reactor is a system designed to maintain what is called a **self-sustained chain reaction**. This important process was first achieved in 1942 by Enrico Fermi and his team at the University of Chicago, using naturally occurring uranium as the fuel.¹ In the first nuclear reactor (Fig. 45.4), Fermi placed bricks of graphite (carbon) between the fuel elements. Carbon nuclei are about 12 times more massive than neutrons, but after several collisions with carbon nuclei, a neutron is slowed sufficiently to increase its likelihood of fission with ^{235}U . In this design, carbon is the moderator; most modern reactors use water as the moderator.

Most reactors in operation today also use uranium as fuel. Naturally occurring uranium contains only 0.7% of the ^{235}U isotope, however, with the remaining 99.3% being ^{238}U . This fact is important to the operation of a reactor because ^{238}U almost never fissions. Instead, it tends to absorb neutrons without a subsequent fission event, producing neptunium and plutonium. For this reason, reactor fuels must be artificially *enriched* to contain at least a few percent ^{235}U .

To achieve a self-sustained chain reaction, an average of one neutron emitted in each ^{235}U fission must be captured by another ^{235}U nucleus and cause that nucleus to undergo fission. A useful parameter for describing the level of reactor operation is the **reproduction constant K** , defined as **the average number of neutrons from each fission event that cause another fission event**. As we have seen, K has an average value of 2.5 in the uncontrolled fission of uranium.

A self-sustained and controlled chain reaction is achieved when $K = 1$. When in this condition, the reactor is said to be **critical**. When $K < 1$, the reactor is subcritical and the reaction dies out. When $K > 1$, the reactor is supercritical and a runaway reaction occurs. In a nuclear reactor used to furnish power to a utility company, it is necessary to maintain a value of K close to 1. If K rises above this value, the rest energy transformed to internal energy in the reaction could melt the reactor.

Several types of reactor systems allow the kinetic energy of fission fragments to be transformed to other types of energy and eventually transferred out of the



© World History Archive/Alamy

Enrico Fermi

Italian Physicist (1901–1954)

Fermi was awarded the Nobel Prize in Physics in 1938 for producing transuranic elements by neutron irradiation and for his discovery of nuclear reactions brought about by thermal neutrons. He made many other outstanding contributions to physics, including his theory of beta decay, the free-electron theory of metals, and the development of the world's first fission reactor in 1942. Fermi was truly a gifted theoretical and experimental physicist. He was also well known for his ability to present physics in a clear and exciting manner.

¹Although Fermi's reactor was the first manufactured nuclear reactor, there is evidence that a natural fission reaction may have sustained itself for perhaps hundreds of thousands of years in a deposit of uranium in Gabon, West Africa. See G. Cowan, "A Natural Fission Reactor," *Scientific American* **235**(5): 36, 1976.

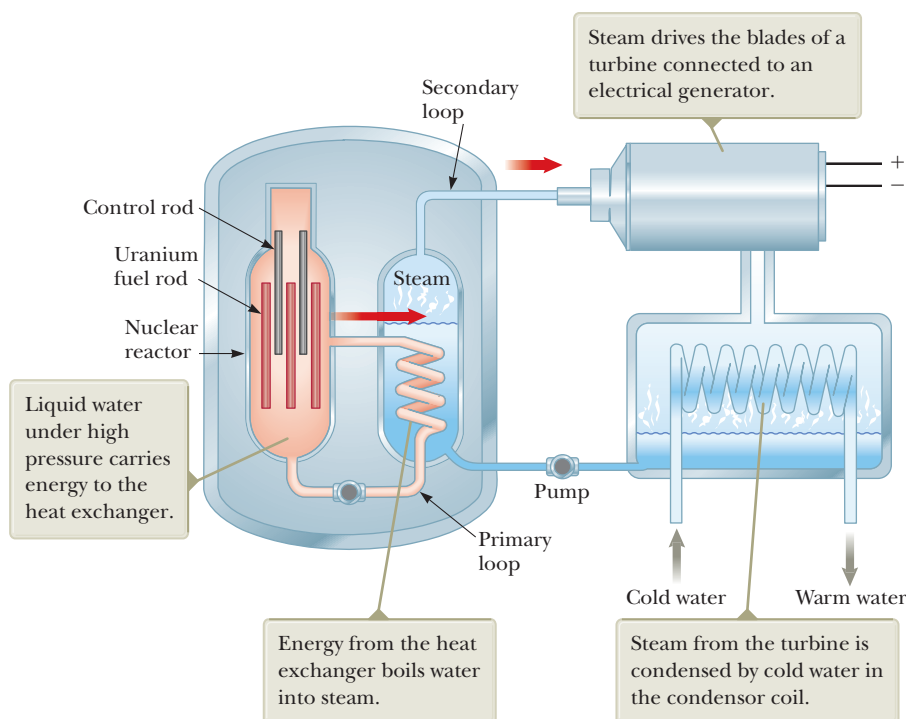


Figure 45.5 Main components of a pressurized-water nuclear reactor.

reactor plant by electrical transmission. The most common reactor in use in the United States is the pressurized-water reactor (Fig. 45.5). We shall examine this type because its main parts are common to all reactor designs. Fission events in the uranium **fuel elements** in the reactor core raise the temperature of the water contained in the primary loop, which is maintained at high pressure to keep the water from boiling. (This water also serves as the moderator to slow down the neutrons released in the fission events with energy of approximately 2 MeV.) The hot water is pumped through a heat exchanger, where the internal energy of the water is transferred by conduction to the water contained in the secondary loop. The hot water in the secondary loop is converted to steam, which does work to drive a turbine–generator system to create electric power. The water in the secondary loop is isolated from the water in the primary loop to avoid contamination of the secondary water and the steam by radioactive nuclei from the reactor core.

In any reactor, a fraction of the neutrons produced in fission leak out of the uranium fuel elements before inducing other fission events. If the fraction leaking out is too large, the reactor will not operate. The percentage lost is large if the fuel elements are very small because leakage is a function of the ratio of surface area to volume. Therefore, a critical feature of the reactor design is an optimal surface area-to-volume ratio of the fuel elements.

Control of Power Level

Safety is of critical importance in the operation of a nuclear reactor. The reproduction constant K must not be allowed to rise above 1, lest a runaway reaction occur. Consequently, reactor design must include a means of controlling the value of K .

The basic design of a nuclear reactor core is shown in Figure 45.6. The fuel elements consist of ^{235}U that has been enriched in the ^{235}U isotope. To control the power level, **control rods** are inserted into the reactor core. These rods are made of materials such as cadmium that are very efficient in absorbing neutrons. By adjusting the number and position of the control rods in the reactor core, the K value

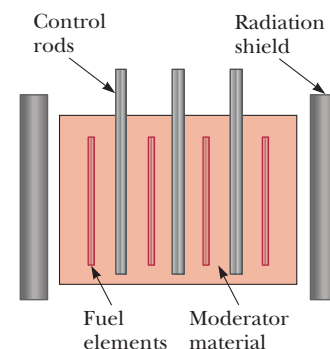


Figure 45.6 Cross section of a reactor core showing the control rods, fuel elements containing enriched fuel, and moderating material, all surrounded by a radiation shield.

can be varied and any power level within the design range of the reactor can be achieved.

- Quick Quiz 45.3** To reduce the value of the reproduction constant K , do you
- (a) push the control rods deeper into the core or (b) pull the control rods farther out of the core?

Safety and Waste Disposal

The 1986 accident at the Chernobyl reactor in Ukraine and the 2011 nuclear disaster caused by the earthquake and tsunami in Japan rightfully focused attention on reactor safety. Unfortunately, at Chernobyl the activity of the materials released immediately after the accident totaled approximately 1.2×10^{19} Bq and resulted in the evacuation of 135 000 people. Thirty individuals died during the accident or shortly thereafter, and data from the Ukraine Radiological Institute suggest that more than 2 500 deaths could be attributed to the Chernobyl accident. In the period 1986–1997, there was a tenfold increase in the number of children contracting thyroid cancer from the ingestion of radioactive iodine in milk from cows that ate contaminated grass. One conclusion of an international conference studying the Ukraine accident was that the main causes of the Chernobyl accident were the coincidence of severe deficiencies in the reactor physical design and a violation of safety procedures. Most of these deficiencies have since been addressed at plants of similar design in Russia and neighboring countries of the former Soviet Union.

The March 2011 accident in Japan was caused by an unfortunate combination of a massive earthquake and subsequent tsunami. The most hard-hit power plant, Fukushima I, shut down automatically after the earthquake. Shutting down a nuclear power plant, however, is not an instantaneous process. Cooling water must continue to be circulated to carry the energy generated by beta decay of the fission by-products out of the reactor core. Unfortunately, the water from the tsunami broke the connection to the power grid, leaving the plant without outside electrical support for circulating the water. While the plant had emergency generators to take over in such a situation, the tsunami inundated the generator rooms, making the generators inoperable. Three of the six reactors at Fukushima experienced meltdown, and there were several explosions. Significant radiation was released into the environment. At the time of this printing, all 54 of Japan's nuclear power plants have been taken offline, and the Japanese public has expressed strong reluctance to continue with nuclear power.

Commercial reactors achieve safety through careful design and rigid operating protocol, and only when these variables are compromised do reactors pose a danger. Radiation exposure and the potential health risks associated with such exposure are controlled by three layers of containment. The fuel and radioactive fission products are contained inside the reactor vessel. Should this vessel rupture, the reactor building acts as a second containment structure to prevent radioactive material from contaminating the environment. Finally, the reactor facilities must be in a remote location to protect the general public from exposure should radiation escape the reactor building.

A continuing concern about nuclear fission reactors is the safe disposal of radioactive material when the reactor core is replaced. This waste material contains long-lived, highly radioactive isotopes and must be stored over long time intervals in such a way that there is no chance of environmental contamination. At present, sealing radioactive wastes in waterproof containers and burying them in deep geologic repositories seems to be the most promising solution.

Transport of reactor fuel and reactor wastes poses additional safety risks. Accidents during transport of nuclear fuel could expose the public to harmful levels of radiation. The U.S. Department of Energy requires stringent crash tests of all con-

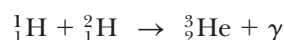
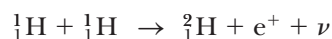
tainers used to transport nuclear materials. Container manufacturers must demonstrate that their containers will not rupture even in high-speed collisions.

Despite these risks, there are advantages to the use of nuclear power to be weighed against the risks. For example, nuclear power plants do not produce air pollution and greenhouse gases as do fossil fuel plants, and the supply of uranium on the Earth is predicted to last longer than the supply of fossil fuels. For each source of energy—whether nuclear, hydroelectric, fossil fuel, wind, solar, or other—the risks must be weighed against the benefits and the availability of the energy source.

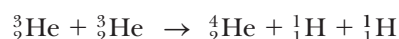
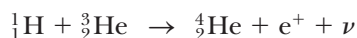
45.4 Nuclear Fusion

In Chapter 44, we found that the binding energy for light nuclei ($A < 20$) is much smaller than the binding energy for heavier nuclei, which suggests a process that is the reverse of fission. As mentioned in Section 39.8, when two light nuclei combine to form a heavier nucleus, the process is called nuclear **fusion**. Because the mass of the final nucleus is less than the combined masses of the original nuclei, there is a loss of mass accompanied by a release of energy.

Two examples of such energy-liberating fusion reactions are as follows:



These reactions occur in the core of a star and are responsible for the outpouring of energy from the star. The second reaction is followed by either hydrogen–helium fusion or helium–helium fusion:



These fusion reactions are the basic reactions in the **proton–proton cycle**, believed to be one of the basic cycles by which energy is generated in the Sun and other stars that contain an abundance of hydrogen. Most of the energy production takes place in the Sun's interior, where the temperature is approximately 1.5×10^7 K. Because such high temperatures are required to drive these reactions, they are called **thermonuclear fusion reactions**. All the reactions in the proton–proton cycle are exothermic. An overview of the cycle is that four protons combine to generate an alpha particle, positrons, gamma rays, and neutrinos.

- Quick Quiz 45.4** In the core of a star, hydrogen nuclei combine in fusion reactions. Once the hydrogen has been exhausted, fusion of helium nuclei can occur. If the star is sufficiently massive, fusion of heavier and heavier nuclei can occur once the helium is used up. Consider a fusion reaction involving two nuclei with the same value of A . For this reaction to be exothermic, which of the following values of A are impossible? (a) 12 (b) 20 (c) 28 (d) 64

Example 45.2 Energy Released in Fusion

Find the total energy released in the fusion reactions in the proton–proton cycle.

SOLUTION

Conceptualize The net nuclear result of the proton–proton cycle is to fuse four protons to form an alpha particle. Study the reactions above for the proton–proton cycle to be sure you understand how four protons become an alpha particle.

Categorize We use concepts discussed in this section, so we categorize this example as a substitution problem.

continued

Pitfall Prevention 45.2

Fission and Fusion The words *fission* and *fusion* sound similar, but they correspond to different processes. Consider the binding-energy graph in Figure 44.5. There are two directions from which you can approach the peak of the graph so that energy is released: combining two light nuclei, or fusion, and separating a heavy nucleus into two lighter nuclei, or fission.

45.2 continued

Find the initial mass of the system using the atomic mass of hydrogen from Table 44.2:

$$4(1.007\,825\text{ u}) = 4.031\,300\text{ u}$$

Find the change in mass of the system as this value minus the mass of a ${}^4\text{He}$ atom:

$$4.031\,300\text{ u} - 4.002\,603\text{ u} = 0.028\,697\text{ u}$$

Convert this mass change into energy units:

$$E = 0.028\,697\text{ u} \times 931.494\text{ MeV/u} = 26.7\text{ MeV}$$

This energy is shared among the alpha particle and other particles such as positrons, gamma rays, and neutrinos.

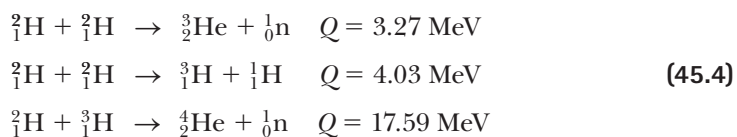
Terrestrial Fusion Reactions

The enormous amount of energy released in fusion reactions suggests the possibility of harnessing this energy for useful purposes. A great deal of effort is currently under way to develop a sustained and controllable thermonuclear reactor, a fusion power reactor. Controlled fusion is often called the ultimate energy source because of the availability of its fuel source: water. For example, if deuterium were used as the fuel, 0.12 g of it could be extracted from 1 gal of water at a cost of about four cents. This amount of deuterium would release approximately 10^{10} J if all nuclei underwent fusion. By comparison, 1 gal of gasoline releases approximately 10^8 J upon burning and costs far more than four cents.

An additional advantage of fusion reactors is that comparatively few radioactive by-products are formed. For the proton–proton cycle, for instance, the end product is safe, nonradioactive helium. Unfortunately, a thermonuclear reactor that can deliver a net power output spread over a reasonable time interval is not yet a reality, and many difficulties must be resolved before a successful device is constructed.

The Sun's energy is based in part on a set of reactions in which hydrogen is converted to helium. The proton–proton interaction is not suitable for use in a fusion reactor, however, because the event requires very high temperatures and densities. The process works in the Sun only because of the extremely high density of protons in the Sun's interior.

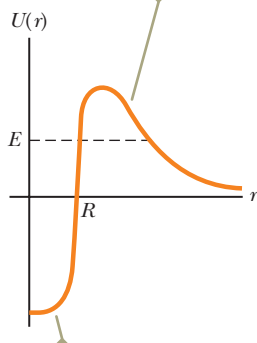
The reactions that appear most promising for a fusion power reactor involve deuterium (${}^2_1\text{H}$) and tritium (${}^3_1\text{H}$):



As noted earlier, deuterium is available in almost unlimited quantities from our lakes and oceans and is very inexpensive to extract. Tritium, however, is radioactive ($T_{1/2} = 12.3$ yr) and undergoes beta decay to ${}^3\text{He}$. For this reason, tritium does not occur naturally to any great extent and must be artificially produced.

One major problem in obtaining energy from nuclear fusion is that the Coulomb repulsive force between two nuclei, which carry positive charges, must be overcome before they can fuse. Figure 45.7 is a graph of potential energy as a function of the separation distance between two deuterons (deuterium nuclei, each having charge $+e$). The potential energy is positive in the region $r > R$, where the Coulomb repulsive force dominates ($R \approx 1$ fm), and negative in the region $r < R$, where the nuclear force dominates. The fundamental problem then is to give the two nuclei enough kinetic energy to overcome this repulsive force. This requirement can be accomplished by raising the fuel to extremely high temperatures (to approximately 10^8 K). At these high temperatures, the atoms are ionized and the system consists of a collection of electrons and nuclei, commonly referred to as a *plasma*.

The Coulomb repulsive force is dominant for large separation distances between the deuterons.



The attractive nuclear force is dominant when the deuterons are close together.

Figure 45.7 Potential energy as a function of separation distance between two deuterons. R is on the order of 1 fm. If we neglect tunneling, the two deuterons require an energy E greater than the height of the barrier to undergo fusion.

Example 45.3 The Fusion of Two Deuterons

For the nuclear force to overcome the repulsive Coulomb force, the separation distance between two deuterons must be approximately 1.0×10^{-14} m.

(A) Calculate the height of the potential barrier due to the repulsive force.

SOLUTION

Conceptualize Imagine moving two deuterons toward each other. As they move closer together, the Coulomb repulsion force becomes stronger. Work must be done on the system to push against this force, and this work appears in the system of two deuterons as electric potential energy.

Categorize We categorize this problem as one involving the electric potential energy of a system of two charged particles.

Analyze Evaluate the potential energy associated with two charges separated by a distance r (Eq. 25.13) for two deuterons:

$$U = k_e \frac{q_1 q_2}{r} = k_e \frac{(+e)^2}{r} = (8.99 \times 10^9 \text{ N} \cdot \text{m}^2/\text{C}^2) \frac{(1.60 \times 10^{-19} \text{ C})^2}{1.0 \times 10^{-14} \text{ m}}$$

$$= 2.3 \times 10^{-14} \text{ J} = \boxed{0.14 \text{ MeV}}$$

(B) Estimate the temperature required for a deuteron to overcome the potential barrier, assuming an energy of $\frac{3}{2}k_B T$ per deuteron (where k_B is Boltzmann's constant).

SOLUTION

Because the total Coulomb energy of the pair is 0.14 MeV, the Coulomb energy per deuteron is equal to $0.07 \text{ MeV} = 1.1 \times 10^{-14} \text{ J}$.

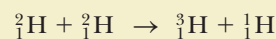
Set this energy equal to the average energy per deuteron:

$$\frac{3}{2}k_B T = 1.1 \times 10^{-14} \text{ J}$$

Solve for T :

$$T = \frac{2(1.1 \times 10^{-14} \text{ J})}{3(1.38 \times 10^{-23} \text{ J/K})} = \boxed{5.6 \times 10^8 \text{ K}}$$

(C) Find the energy released in the deuterium–deuterium reaction



SOLUTION

The mass of a single deuterium atom is equal to 2.014 102 u. Therefore, the total mass of the system before the reaction is 4.028 204 u.

Find the sum of the masses after the reaction:

$$3.016 049 \text{ u} + 1.007 825 \text{ u} = 4.023 874 \text{ u}$$


Find the change in mass and convert to energy units:

$$4.028 204 \text{ u} - 4.023 874 \text{ u} = 0.004 33 \text{ u}$$

$$= 0.004 33 \text{ u} \times 931.494 \text{ MeV/u} = \boxed{4.03 \text{ MeV}}$$

Finalize The calculated temperature in part (B) is too high because the particles in the plasma have a Maxwellian speed distribution (Section 21.5) and therefore some fusion reactions are caused by particles in the high-energy tail of this distribution. Furthermore, even those particles that do not have enough energy to overcome the barrier have some probability of tunneling through (Section 41.5). When these effects are taken into account, a temperature of “only” $4 \times 10^8 \text{ K}$ appears adequate to fuse two deuterons in a plasma. In part (C), notice that the energy value is consistent with that already given in Equation 45.4.

WHAT IF? Suppose the tritium resulting from the reaction in part (C) reacts with another deuterium in the reaction



How much energy is released in the sequence of two reactions?

continued

45.3 continued

Answer The overall effect of the sequence of two reactions is that three deuterium nuclei have combined to form a helium nucleus, a hydrogen nucleus, and a neutron. The initial mass is $3(2.014\,102\text{ u}) = 6.042\,306\text{ u}$. After the reaction, the sum of the masses is $4.002\,603\text{ u} + 1.007\,825\text{ u} + 1.008\,665 = 6.019\,093\text{ u}$. The excess mass is equal to $0.023\,213\text{ u}$, equivalent to an energy of 21.6 MeV. Notice that this value is the sum of the Q values for the second and third reactions in Equation 45.4.

The temperature at which the power generation rate in any fusion reaction exceeds the loss rate is called the **critical ignition temperature** T_{ignit} . This temperature for the deuterium–deuterium (D–D) reaction is $4 \times 10^8\text{ K}$. From the relationship $E \approx \frac{3}{2}k_{\text{B}}T$, the ignition temperature is equivalent to approximately 52 keV. The critical ignition temperature for the deuterium–tritium (D–T) reaction is approximately $4.5 \times 10^7\text{ K}$, or only 6 keV. A plot of the power P_{gen} generated by fusion versus temperature for the two reactions is shown in Figure 45.8. The straight green line represents the power P_{lost} lost via the radiation mechanism known as bremsstrahlung (Section 42.8). In this principal mechanism of energy loss, radiation (primarily x-rays) is emitted as the result of electron–ion collisions within the plasma. The intersections of the P_{lost} line with the P_{gen} curves give the critical ignition temperatures.

In addition to the high-temperature requirements, two other critical parameters determine whether or not a thermonuclear reactor is successful: the **ion density** n and **confinement time** τ , which is the time interval during which energy injected into the plasma remains within the plasma. British physicist J. D. Lawson (1923–2008) showed that both the ion density and confinement time must be large enough to ensure that more fusion energy is released than the amount required to raise the temperature of the plasma. For a given value of n , the probability of fusion between two particles increases as τ increases. For a given value of τ , the collision rate between nuclei increases as n increases. The product $n\tau$ is referred to as the **Lawson number** of a reaction. A graph of the value of $n\tau$ necessary to achieve a net energy output for the D–T and D–D reactions at different temperatures is shown in Figure 45.9. In particular, **Lawson’s criterion** states that a net energy output is possible for values of $n\tau$ that meet the following conditions:

$$n\tau \geq 10^{14}\text{ s/cm}^3 \quad (\text{D–T}) \quad (45.5)$$

$$n\tau \geq 10^{16}\text{ s/cm}^3 \quad (\text{D–D})$$

These values represent the minima of the curves in Figure 45.9.

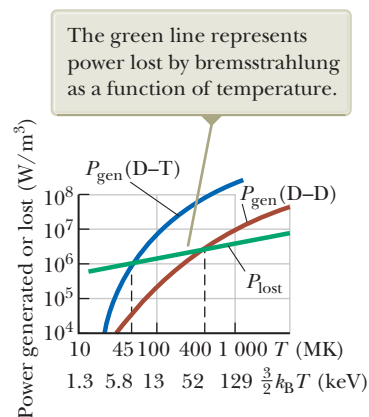


Figure 45.8 Power generated versus temperature for deuterium–deuterium (D–D) and deuterium–tritium (D–T) fusion. When the generation rate exceeds the loss rate, ignition takes place.

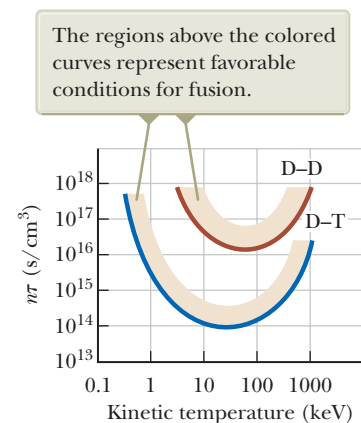


Figure 45.9 The Lawson number $n\tau$ at which net energy output is possible versus temperature for the D–T and D–D fusion reactions.




Figure 45.10 (a) Diagram of a tokamak used in the magnetic confinement scheme. (b) Interior view of the closed Tokamak Fusion Test Reactor (TFTR) vacuum vessel at the Princeton Plasma Physics Laboratory. (c) The National Spherical Torus Experiment (NSTX) that began operation in March 1999.

Lawson's criterion was arrived at by comparing the energy required to raise the temperature of a given plasma with the energy generated by the fusion process.² The energy E_{in} required to raise the temperature of the plasma is proportional to the ion density n , which we can express as $E_{\text{in}} = C_1 n$, where C_1 is some constant. The energy generated by the fusion process is proportional to $n^2 \tau$, or $E_{\text{gen}} = C_2 n^2 \tau$. This dependence may be understood by realizing that the fusion energy released is proportional to both the rate at which interacting ions collide ($\propto n^2$) and the confinement time τ . Net energy is produced when $E_{\text{gen}} > E_{\text{in}}$. When the constants C_1 and C_2 are calculated for different reactions, the condition that $E_{\text{gen}} \geq E_{\text{in}}$ leads to Lawson's criterion.

Current efforts are aimed at meeting Lawson's criterion at temperatures exceeding T_{ignit} . Although the minimum required plasma densities have been achieved, the problem of confinement time is more difficult. The two basic techniques under investigation for solving this problem are *magnetic confinement* and *inertial confinement*.

Magnetic Confinement

Many fusion-related plasma experiments use **magnetic confinement** to contain the plasma. A toroidal device called a **tokamak**, first developed in Russia, is shown in Figure 45.10a. A combination of two magnetic fields is used to confine and stabilize the plasma: (1) a strong toroidal field produced by the current in the toroidal windings surrounding a doughnut-shaped vacuum chamber and (2) a weaker "poloidal" field produced by the toroidal current. In addition to confining the plasma, the toroidal current is used to raise its temperature. The resultant helical magnetic field lines spiral around the plasma and keep it from touching the walls of the vacuum chamber. (If the plasma touches the walls, its temperature is reduced and heavy impurities sputtered from the walls "poison" it, leading to large power losses.)

One major breakthrough in magnetic confinement in the 1980s was in the area of auxiliary energy input to reach ignition temperatures. Experiments have shown

²Lawson's criterion neglects the energy needed to set up the strong magnetic field used to confine the hot plasma in a magnetic confinement approach. This energy is expected to be about 20 times greater than the energy required to raise the temperature of the plasma. It is therefore necessary either to have a magnetic energy recovery system or to use superconducting magnets.

that injecting a beam of energetic neutral particles into the plasma is a very efficient method of raising it to ignition temperatures. Radio-frequency energy input will probably be needed for reactor-size plasmas.

When it was in operation from 1982 to 1997, the Tokamak Fusion Test Reactor (TFTR, Fig. 45.10b) at Princeton University reported central ion temperatures of 510 million degrees Celsius, more than 30 times greater than the temperature at the center of the Sun. The $n\tau$ values in the TFTR for the D–T reaction were well above 10^{13} s/cm³ and close to the value required by Lawson’s criterion. In 1991, reaction rates of 6×10^{17} D–T fusions per second were reached in the Joint European Torus (JET) tokamak at Abington, England.

One of the new generation of fusion experiments is the National Spherical Torus Experiment (NSTX) at the Princeton Plasma Physics Laboratory and shown in Figure 45.10c. This reactor was brought on line in February 1999 and has been running fusion experiments since then. Rather than the doughnut-shaped plasma of a tokamak, the NSTX produces a spherical plasma that has a hole through its center. The major advantage of the spherical configuration is its ability to confine the plasma at a higher pressure in a given magnetic field. This approach could lead to development of smaller, more economical fusion reactors.

An international collaborative effort involving the United States, the European Union, Japan, China, South Korea, India, and Russia is currently under way to build a fusion reactor called ITER. This acronym stands for International Thermonuclear Experimental Reactor, although recently the emphasis has shifted to interpreting “iter” in terms of its Latin meaning, “the way.” One reason proposed for this change is to avoid public misunderstanding and negative connotations toward the word *thermonuclear*. This facility will address the remaining technological and scientific issues concerning the feasibility of fusion power. The design is completed, and Cadarache, France, was chosen in June 2005 as the reactor site. Construction began in 2007 and will require about 10 years, with fusion operation projected to begin in 2019. If the planned device works as expected, the Lawson number for ITER will be about six times greater than the current record holder, the JT-60U tokamak in Japan. ITER is expected to produce ten times as much output power as input power, and the energy content of the alpha particles inside the reactor will be so intense that they will sustain the fusion reaction, allowing the auxiliary energy sources to be turned off once the reaction is initiated.

Example 45.4 Inside a Fusion Reactor

In 1998, the JT-60U tokamak in Japan operated with a D–T plasma density of 4.8×10^{13} cm⁻³ at a temperature (in energy units) of 24.1 keV. It confined this plasma inside a magnetic field for 1.1 s.

(A) Do these data meet Lawson’s criterion?

SOLUTION

Conceptualize With the help of the third of Equations 45.4, imagine many such reactions occurring in a plasma of high temperature and high density.

Categorize We use the concept of the Lawson number discussed in this section, so we categorize this example as a substitution problem.

Evaluate the Lawson number for the JT-60U:

$$n\tau = (4.8 \times 10^{13} \text{ cm}^{-3})(1.1 \text{ s}) = 5.3 \times 10^{13} \text{ s/cm}^3$$

This value is close to meeting Lawson’s criterion of 10^{14} s/cm³ for a D–T plasma given in Equation 45.5. In fact, scientists recorded a power gain of 1.25, indicating that the reactor operated slightly past the break-even point and produced more energy than it required to maintain the plasma.

(B) How does the plasma density compare with the density of atoms in an ideal gas when the gas is under standard conditions ($T = 0^\circ\text{C}$ and $P = 1 \text{ atm}$)?

45.4 continued

SOLUTION

Find the density of atoms in a sample of ideal gas by evaluating N_A/V_{mol} , where N_A is Avogadro's number and V_{mol} is the molar volume of an ideal gas under standard conditions, $2.24 \times 10^{-2} \text{ m}^3/\text{mol}$:

$$\begin{aligned} \frac{N_A}{V_{\text{mol}}} &= \frac{6.02 \times 10^{23} \text{ atoms/mol}}{2.24 \times 10^{-2} \text{ m}^3/\text{mol}} = 2.7 \times 10^{25} \text{ atoms/m}^3 \\ &= 2.7 \times 10^{19} \text{ atoms/cm}^3 \end{aligned}$$

This value is more than 500 000 times greater than the plasma density in the reactor.

Inertial Confinement

The second technique for confining a plasma, called **inertial confinement**, makes use of a D–T target that has a very high particle density. In this scheme, the confinement time is very short (typically 10^{-11} to 10^{-9} s), and, because of their own inertia, the particles do not have a chance to move appreciably from their initial positions. Therefore, Lawson's criterion can be satisfied by combining a high particle density with a short confinement time.

Laser fusion is the most common form of inertial confinement. A small D–T pellet, approximately 1 mm in diameter, is struck simultaneously by several focused, high-intensity laser beams, resulting in a large pulse of input energy that causes the surface of the fuel pellet to evaporate (Fig. 45.11). The escaping particles exert a third-law reaction force on the core of the pellet, resulting in a strong, inwardly moving compressive shock wave. This shock wave increases the pressure and density of the core and produces a corresponding increase in temperature. When the temperature of the core reaches ignition temperature, fusion reactions occur.

One of the leading laser fusion laboratories in the United States is the Omega facility at the University of Rochester in New York. This facility focuses 24 laser beams on the target. Currently under operation at the Lawrence Livermore National Laboratory in Livermore, California, is the National Ignition Facility. The research apparatus there includes 192 laser beams that can be focused on a deuterium–tritium pellet. Construction was completed in early 2009, and a test firing of the lasers in March 2012 broke the record for lasers, delivering 1.87 MJ to a target. This energy is delivered in such a short time interval that the power is immense: 500 trillion watts, more than 1 000 times the power used in the United States at any moment.

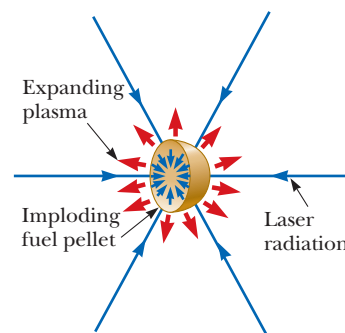
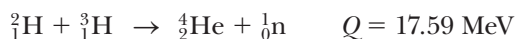


Figure 45.11 In inertial confinement, a D–T fuel pellet fuses when struck by several high-intensity laser beams simultaneously.

Fusion Reactor Design

In the D–T fusion reaction



the alpha particle carries 20% of the energy and the neutron carries 80%, or approximately 14 MeV. A diagram of the deuterium–tritium fusion reaction is shown in Figure 45.12. Because the alpha particles are charged, they are primarily absorbed by the plasma, causing the plasma's temperature to increase. In contrast, the 14-MeV neutrons, being electrically neutral, pass through the plasma and are absorbed by a surrounding blanket material, where their large kinetic energy is extracted and used to generate electric power.

One scheme is to use molten lithium metal as the neutron-absorbing material and to circulate the lithium in a closed heat-exchange loop, thereby producing steam and driving turbines as in a conventional power plant. Figure 45.13 (page 1432) shows a diagram of such a reactor. It is estimated that a blanket of lithium approximately 1 m thick will capture nearly 100% of the neutrons from the fusion of a small D–T pellet.

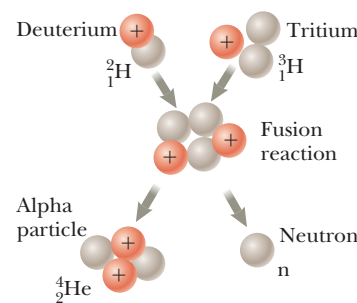
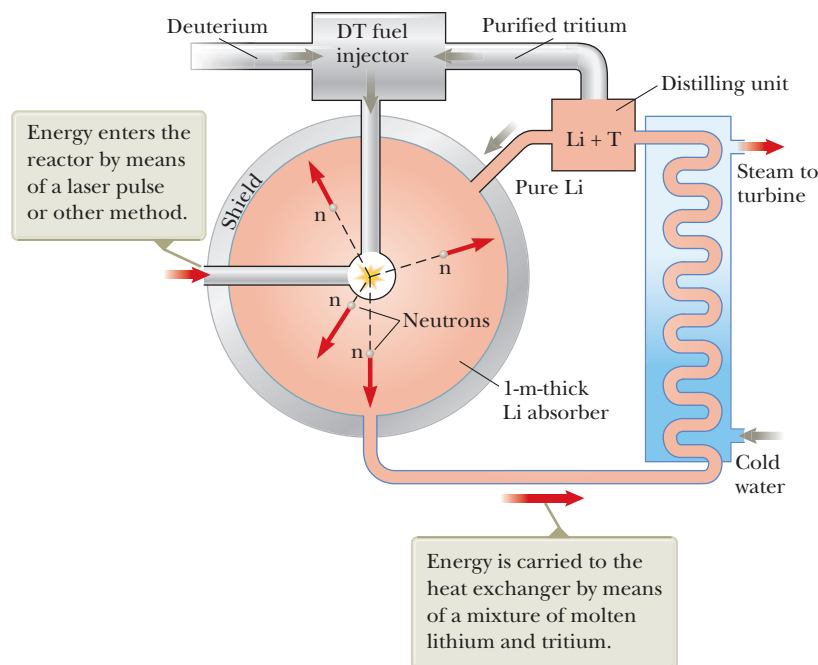



Figure 45.12 Deuterium–tritium fusion. Eighty percent of the energy released is in the 14-MeV neutron.

Figure 45.13 Diagram of a fusion reactor.



The capture of neutrons by lithium is described by the reaction



where the kinetic energies of the charged tritium ${}_1^3\text{H}$ and alpha particle are transformed to internal energy in the molten lithium. An extra advantage of using lithium as the energy-transfer medium is that the tritium produced can be separated from the lithium and returned as fuel to the reactor.

Advantages and Problems of Fusion

If fusion power can ever be harnessed, it will offer several advantages over fission-generated power: (1) low cost and abundance of fuel (deuterium), (2) impossibility of runaway accidents, and (3) decreased radiation hazard. Some of the anticipated problems and disadvantages include (1) scarcity of lithium, (2) limited supply of helium, which is needed for cooling the superconducting magnets used to produce strong confining fields, and (3) structural damage and induced radioactivity caused by neutron bombardment. If such problems and the engineering design factors can be resolved, nuclear fusion may become a feasible source of energy in the twenty-first century.

45.5 Radiation Damage

In Chapter 34, we learned that electromagnetic radiation is all around us in the form of radio waves, microwaves, light waves, and so on. In this section, we describe forms of radiation that can cause severe damage as they pass through matter, such as radiation resulting from radioactive processes and radiation in the form of energetic particles such as neutrons and protons.

The degree and type of damage depend on several factors, including the type and energy of the radiation and the properties of the matter. The metals used in nuclear reactor structures can be severely weakened by high fluxes of energetic neutrons because these high fluxes often lead to metal fatigue. The damage in such situations is in the form of atomic displacements, often resulting in major alterations in the properties of the material.

Radiation damage in biological organisms is primarily due to ionization effects in cells. A cell's normal operation may be disrupted when highly reactive ions are formed as the result of ionizing radiation. For example, hydrogen and the hydroxyl radical OH^- produced from water molecules can induce chemical reactions that may break bonds in proteins and other vital molecules. Furthermore, the ionizing radiation may affect vital molecules directly by removing electrons from their structure. Large doses of radiation are especially dangerous because damage to a great number of molecules in a cell may cause the cell to die. Although the death of a single cell is usually not a problem, the death of many cells may result in irreversible damage to the organism. Cells that divide rapidly, such as those of the digestive tract, reproductive organs, and hair follicles, are especially susceptible. In addition, cells that survive the radiation may become defective. These defective cells can produce more defective cells and can lead to cancer.

In biological systems, it is common to separate radiation damage into two categories: somatic damage and genetic damage. *Somatic damage* is that associated with any body cell except the reproductive cells. Somatic damage can lead to cancer or can seriously alter the characteristics of specific organisms. *Genetic damage* affects only reproductive cells. Damage to the genes in reproductive cells can lead to defective offspring. It is important to be aware of the effect of diagnostic treatments, such as x-rays and other forms of radiation exposure, and to balance the significant benefits of treatment with the damaging effects.

Damage caused by radiation also depends on the radiation's penetrating power. Alpha particles cause extensive damage, but penetrate only to a shallow depth in a material due to the strong interaction with other charged particles. Neutrons do not interact via the electric force and hence penetrate deeper, causing significant damage. Gamma rays are high-energy photons that can cause severe damage, but often pass through matter without interaction.

Several units have been used historically to quantify the amount, or dose, of any radiation that interacts with a substance.

The **roentgen (R)** is that amount of ionizing radiation that produces an electric charge of 3.33×10^{-10} C in 1 cm^3 of air under standard conditions.

Equivalently, the roentgen is that amount of radiation that increases the energy of 1 kg of air by 8.76×10^{-3} J.

For most applications, the roentgen has been replaced by the rad (an acronym for *radiation absorbed dose*):

One **rad** is that amount of radiation that increases the energy of 1 kg of absorbing material by 1×10^{-2} J.

Although the rad is a perfectly good physical unit, it is not the best unit for measuring the degree of biological damage produced by radiation because damage depends not only on the dose but also on the type of the radiation. For example, a given dose of alpha particles causes about ten times more biological damage than an equal dose of x-rays. The **RBE** (relative biological effectiveness) factor for a given type of radiation is **the number of rads of x-radiation or gamma radiation that produces the same biological damage as 1 rad of the radiation being used**. The RBE factors for different types of radiation are given in Table 45.1 (page 1434). The values are only approximate because they vary with particle energy and with the form of the damage. The RBE factor should be considered only a first-approximation guide to the actual effects of radiation.

Finally, the **rem** (radiation equivalent in man) is the product of the dose in rad and the RBE factor:

$$\text{Dose in rem} \equiv \text{dose in rad} \times \text{RBE} \quad (45.6)$$

Table 45.1 RBE Factors for Several Types of Radiation

Radiation	RBE Factor
X-rays and gamma rays	1.0
Beta particles	1.0–1.7
Alpha particles	10–20
Thermal neutrons	4–5
Fast neutrons and protons	10
Heavy ions	20

Note: RBE = relative biological effectiveness.

Table 45.2 Units for Radiation Dosage

Quantity	SI Unit	Symbol	Relations to Other SI Units	Older Unit	Conversion
Absorbed dose	gray	Gy	= 1 J/kg	rad	1 Gy = 100 rad
Dose equivalent	sievert	Sv	= 1 J/kg	rem	1 Sv = 100 rem

According to this definition, 1 rem of any two types of radiation produces the same amount of biological damage. Table 45.1 shows that a dose of 1 rad of fast neutrons represents an effective dose of 10 rem, but 1 rad of gamma radiation is equivalent to a dose of only 1 rem.

This discussion has focused on measurements of radiation dosage in units such as rads and rems because these units are still widely used. They have, however, been formally replaced with new SI units. The rad has been replaced with the *gray* (Gy), equal to 100 rad, and the rem has been replaced with the *sievert* (Sv), equal to 100 rem. Table 45.2 summarizes the older and the current SI units of radiation dosage.

Low-level radiation from natural sources such as cosmic rays and radioactive rocks and soil delivers to each of us a dose of approximately 2.4 mSv/yr. This radiation, called *background radiation*, varies with geography, with the main factors being altitude (exposure to cosmic rays) and geology (radon gas released by some rock formations, deposits of naturally radioactive minerals).

The upper limit of radiation dose rate recommended by the U.S. government (apart from background radiation) is approximately 5 mSv/yr. Many occupations involve much higher radiation exposures, so an upper limit of 50 mSv/yr has been set for combined whole-body exposure. Higher upper limits are permissible for certain parts of the body, such as the hands and the forearms. A dose of 4 to 5 Sv results in a mortality rate of approximately 50% (which means that half the people exposed to this radiation level die). The most dangerous form of exposure for most people is either ingestion or inhalation of radioactive isotopes, especially isotopes of those elements the body retains and concentrates, such as ^{90}Sr .

45.6 Uses of Radiation

Nuclear physics applications are extremely widespread in manufacturing, medicine, and biology. In this section, we present a few of these applications and the underlying theories supporting them.

Tracing

Radioactive tracers are used to track chemicals participating in various reactions. One of the most valuable uses of radioactive tracers is in medicine. For example, iodine, a nutrient needed by the human body, is obtained largely through the

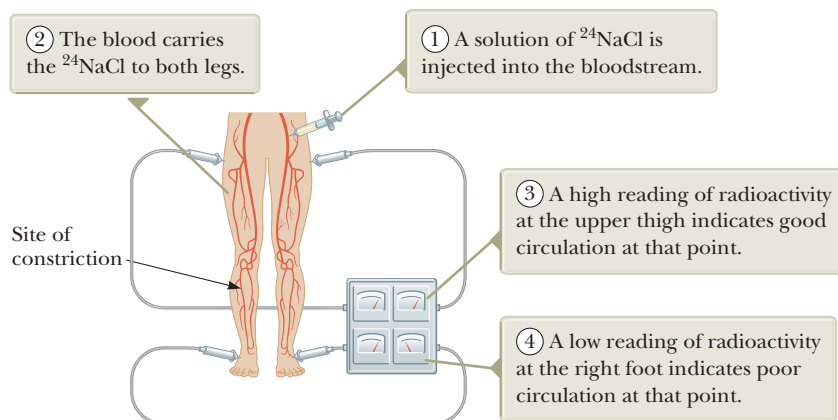


Figure 45.14 A tracer technique for determining the condition of the human circulatory system.

intake of iodized salt and seafood. To evaluate the performance of the thyroid, the patient drinks a very small amount of radioactive sodium iodide containing ^{131}I , an artificially produced isotope of iodine (the natural, nonradioactive isotope is ^{127}I). The amount of iodine in the thyroid gland is determined as a function of time by measuring the radiation intensity at the neck area. How much of the isotope ^{131}I remains in the thyroid is a measure of how well that gland is functioning.

A second medical application is indicated in Figure 45.14. A solution containing radioactive sodium is injected into a vein in the leg, and the time at which the radioisotope arrives at another part of the body is detected with a radiation counter. The elapsed time is a good indication of the presence or absence of constrictions in the circulatory system.

Tracers are also useful in agricultural research. Suppose the best method of fertilizing a plant is to be determined. A certain element in a fertilizer, such as nitrogen, can be *tagged* (identified) with one of its radioactive isotopes. The fertilizer is then sprayed on one group of plants, sprinkled on the ground for a second group, and raked into the soil for a third. A Geiger counter is then used to track the nitrogen through each of the three groups.

Tracing techniques are as wide ranging as human ingenuity can devise. Today, applications range from checking how teeth absorb fluoride to monitoring how cleansers contaminate food-processing equipment to studying deterioration inside an automobile engine. In this last case, a radioactive material is used in the manufacture of the car's piston rings and the oil is checked for radioactivity to determine the amount of wear on the rings.

Materials Analysis

For centuries, a standard method of identifying the elements in a sample of material has been chemical analysis, which involves determining how the material reacts with various chemicals. A second method is spectral analysis, which works because each element, when excited, emits its own characteristic set of electromagnetic wavelengths. These methods are now supplemented by a third technique, **neutron activation analysis**. A disadvantage of both chemical and spectral methods is that a fairly large sample of the material must be destroyed for the analysis. In addition, extremely small quantities of an element may go undetected by either method. Neutron activation analysis has an advantage over chemical analysis and spectral analysis in both respects.

When a material is irradiated with neutrons, nuclei in the material absorb the neutrons and are changed to different isotopes, most of which are radioactive. For example, ^{65}Cu absorbs a neutron to become ^{66}Cu , which undergoes beta decay:



The presence of the copper can be deduced because it is known that ^{66}Cu has a half-life of 5.1 min and decays with the emission of beta particles having a maximum energy of 2.63 MeV. Also emitted in the decay of ^{66}Cu is a 1.04-MeV gamma ray. By examining the radiation emitted by a substance after it has been exposed to neutron irradiation, one can detect extremely small amounts of an element in that substance.

Neutron activation analysis is used routinely in a number of industries. In commercial aviation, for example, it is used to check airline luggage for hidden explosives. One nonroutine use is of historical interest. Napoleon died on the island of St. Helena in 1821, supposedly of natural causes. Over the years, suspicion has existed that his death was not all that natural. After his death, his head was shaved and locks of his hair were sold as souvenirs. In 1961, the amount of arsenic in a sample of this hair was measured by neutron activation analysis, and an unusually large quantity of arsenic was found. (Activation analysis is so sensitive that very small pieces of a single hair could be analyzed.) Results showed that the arsenic was fed to him irregularly. In fact, the arsenic concentration pattern corresponded to the fluctuations in the severity of Napoleon's illness as determined from historical records.

Art historians use neutron activation analysis to detect forgeries. The pigments used in paints have changed throughout history, and old and new pigments react differently to neutron activation. The method can even reveal hidden works of art behind existing paintings because an older, hidden layer of paint reacts differently than the surface layer to neutron activation.

Radiation Therapy

Radiation causes much damage to rapidly dividing cells. Therefore, it is useful in cancer treatment because tumor cells divide extremely rapidly. Several mechanisms can be used to deliver radiation to a tumor. In Section 42.8, we discussed the use of high-energy x-rays in the treatment of cancerous tissue. Other treatment protocols include the use of narrow beams of radiation from a radioactive source. As an example, Figure 45.15 shows a machine that uses ^{60}Co as a source. The ^{60}Co isotope emits gamma rays with photon energies higher than 1 MeV.

In other situations, a technique called *brachytherapy* is used. In this treatment plan, thin radioactive needles called *seeds* are implanted in the cancerous tissue. The energy emitted from the seeds is delivered directly to the tumor, reducing the exposure of surrounding tissue to radiation damage. In the case of prostate cancer, the active isotopes used in brachytherapy include ^{125}I and ^{103}Pd .

Food Preservation

Radiation is finding increasing use as a means of preserving food because exposure to high levels of radiation can destroy or incapacitate bacteria and mold spores (Fig. 45.16). Techniques include exposing foods to gamma rays, high-energy electron beams, and x-rays. Food preserved by such exposure can be placed in a sealed container (to keep out new spoiling agents) and stored for long periods of time. There is little or no evidence of adverse effect on the taste or nutritional value of food

Figure 45.15 This large machine is being set to deliver a dose of radiation from ^{60}Co in an effort to destroy a cancerous tumor. Cancer cells are especially susceptible to this type of therapy because they tend to divide more often than cells of healthy tissue nearby.



Martin Dohirn/Photo Researchers, Inc.




Figure 45.16 The strawberries on the left are untreated and have become moldy. The unspoiled strawberries on the right have been irradiated. The radiation has killed or incapacitated the mold spores that have spoiled the strawberries on the left.

from irradiation. The safety of irradiated foods has been endorsed by the World Health Organization, the Centers for Disease Control and Prevention, the U.S. Department of Agriculture, and the Food and Drug Administration. Irradiation of food is presently permitted in more than 50 countries. Some estimates place the amount of irradiated food in the world as high as 500 000 metric tons each year.

Summary

Concepts and Principles

The probability that neutrons are captured as they move through matter generally increases with decreasing neutron energy. A **thermal neutron** is a slow-moving neutron that has a high probability of being captured by a nucleus in a **neutron capture event**:



where ${}_Z^{A+1}\text{X}^*$ is an excited intermediate nucleus that rapidly emits a photon.

Nuclear fission occurs when a very heavy nucleus, such as ${}^{235}\text{U}$, splits into two smaller **fission fragments**. Thermal neutrons can create fission in ${}^{235}\text{U}$:



where ${}_{92}^{236}\text{U}^*$ is an intermediate excited state and X and Y are the fission fragments. On average, 2.5 neutrons are released per fission event. The fragments then undergo a series of beta and gamma decays to various stable isotopes. The energy released per fission event is approximately 200 MeV.

The **reproduction constant** K is the average number of neutrons released from each fission event that cause another event. In a fission reactor, it is necessary to maintain $K \approx 1$. The value of K is affected by such factors as reactor geometry, mean neutron energy, and probability of neutron capture.

In **nuclear fusion**, two light nuclei fuse to form a heavier nucleus and release energy. The major obstacle in obtaining useful energy from fusion is the large Coulomb repulsive force between the charged nuclei at small separation distances. The temperature required to produce fusion is on the order of 10^8 K, and at this temperature, all matter occurs as a plasma.

In a fusion reactor, the plasma temperature must reach the **critical ignition temperature**, the temperature at which the power generated by the fusion reactions exceeds the power lost in the system. The most promising fusion reaction is the D–T reaction, which has a critical ignition temperature of approximately 4.5×10^7 K. Two critical parameters in fusion reactor design are **ion density** n and **confinement time** τ , the time interval during which the interacting particles must be maintained at $T > T_{\text{ignit}}$. **Lawson's criterion** states that for the D–T reaction, $n\tau \geq 10^{14}$ s/cm³.


Objective Questions

1. denotes answer available in *Student Solutions Manual/Study Guide*

- In a certain fission reaction, a ^{235}U nucleus captures a neutron. This process results in the creation of the products ^{137}I and ^{96}Y along with how many neutrons? (a) 1 (b) 2 (c) 3 (d) 4 (e) 5
- Which particle is most likely to be captured by a ^{235}U nucleus and cause it to undergo fission? (a) an energetic proton (b) an energetic neutron (c) a slow-moving alpha particle (d) a slow-moving neutron (e) a fast-moving electron
- In the first nuclear weapon test carried out in New Mexico, the energy released was equivalent to approximately 17 kilotons of TNT. Estimate the mass decrease in the nuclear fuel representing the energy converted from rest energy into other forms in this event. *Note:* One ton of TNT has the energy equivalent of $4.2 \times 10^9 \text{ J}$. (a) $1 \mu\text{g}$ (b) 1 mg (c) 1 g (d) 1 kg (e) 20 kg
- Working with radioactive materials at a laboratory over one year, (a) Tom received 1 rem of alpha radiation, (b) Karen received 1 rad of fast neutrons, (c) Paul received 1 rad of thermal neutrons as a whole-body dose, and (d) Ingrid received 1 rad of thermal neutrons to her hands only. Rank these four doses according to the likely amount of biological damage from the greatest to the least, noting any cases of equality.
- If the moderator were suddenly removed from a nuclear reactor in an electric generating station, what is the most likely consequence? (a) The reactor would go supercritical, and a runaway reaction would occur. (b) The nuclear reaction would proceed in the same way, but the reactor would overheat. (c) The reactor would become subcritical, and the reaction would die out. (d) No change would occur in the reactor's operation.
- You may use Figure 44.5 to answer this question. Three nuclear reactions take place, each involving 108 nucleons: (1) eighteen ^6Li nuclei fuse in pairs to form nine ^{12}C nuclei, (2) four nuclei each with 27 nucleons fuse in pairs to form two nuclei with 54 nucleons, and (3) one nucleus with 108 nucleons fissions to form two nuclei with 54 nucleons. Rank these three reactions from the largest positive Q value (representing energy output) to the largest negative

value (representing energy input). Also include $Q = 0$ in your ranking to make clear which of the reactions put out energy and which absorb energy. Note any cases of equality in your ranking.

- A device called a *bubble chamber* uses a liquid (usually liquid hydrogen) maintained near its boiling point. Ions produced by incoming charged particles from nuclear decays leave bubble tracks, which can be photographed. Figure OQ45.7 shows particle tracks in a bubble chamber immersed in a magnetic field. The tracks are generally spirals rather than sections of circles. What is the primary reason for this shape? (a) The magnetic field is not perpendicular to the velocity of the particles. (b) The magnetic field is not uniform in space. (c) The forces on the particles increase with time. (d) The speeds of the particles decrease with time.



Courtesy Lawrence Berkeley Laboratory, University of California, Photographic Services

Figure OQ45.7

- If an alpha particle and an electron have the same kinetic energy, which undergoes the greater deflection when passed through a magnetic field? (a) The alpha particle does. (b) The electron does. (c) They undergo the same deflection. (d) Neither is deflected.
- Which of the following fuel conditions is *not* necessary to operate a self-sustained controlled fusion reactor? (a) The fuel must be at a sufficiently high temperature. (b) The fuel must be radioactive. (c) The fuel must be at a sufficiently high density. (d) The fuel must be confined for a sufficiently long period of time. (e) Conditions (a) through (d) are all necessary.

Conceptual Questions

1. denotes answer available in *Student Solutions Manual/Study Guide*

- What factors make a terrestrial fusion reaction difficult to achieve?
- Lawson's criterion states that the product of ion density and confinement time must exceed a certain number before a break-even fusion reaction can occur. Why should these two parameters determine the outcome?
- Why would a fusion reactor produce less radioactive waste than a fission reactor?
- Discuss the advantages and disadvantages of fission reactors from the point of view of safety, pollution, and resources. Make a comparison with power generated from the burning of fossil fuels.

5. Discuss the similarities and differences between fusion and fission.
6. If a nucleus captures a slow-moving neutron, the product is left in a highly excited state, with an energy approximately 8 MeV above the ground state. Explain the source of the excitation energy.
7. Discuss the advantages and disadvantages of fusion power from the viewpoint of safety, pollution, and resources.
8. A scintillation crystal can be a detector of radiation when combined with a photomultiplier tube (Section 40.2). The scintillator is usually a solid or liquid material whose atoms are easily excited by radiation. The excited atoms then emit photons when they return to their ground state. The design of the radiation detector in Figure CQ45.8 might suggest that any number of dynodes may be used to amplify a weak signal. What factors do you suppose would limit the amplification in this device?

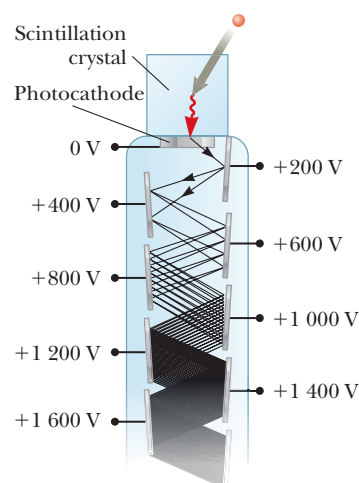


Figure CQ45.8

9. Why is water a better shield against neutrons than lead or steel?

Problems

ENHANCED
WebAssign The problems found in this chapter may be assigned online in Enhanced WebAssign

1. straightforward; 2. intermediate;
3. challenging

1. full solution available in the *Student Solutions Manual/Study Guide*

AMT Analysis Model tutorial available in Enhanced WebAssign

GP Guided Problem

M Master It tutorial available in Enhanced WebAssign

W Watch It video solution available in Enhanced WebAssign

Section 45.1 Interactions Involving Neutrons

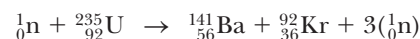
Section 45.2 Nuclear Fission

Problem 57 in Chapter 25 and Problems 22 and 78 in Chapter 44 can be assigned with this chapter.

1. If the average energy released in a fission event is 208 MeV, find the total number of fission events required to operate a 100-W lightbulb for 1.0 h.
2. Burning one metric ton (1 000 kg) of coal can yield an energy of 3.30×10^{10} J. Fission of one nucleus of uranium-235 yields an average of approximately 200 MeV. What mass of uranium produces the same energy in fission as burning one metric ton of coal?
3. Strontium-90 is a particularly dangerous fission product of ^{235}U because it is radioactive and it substitutes for calcium in bones. What other direct fission products would accompany it in the neutron-induced fission of ^{235}U ? *Note:* This reaction may release two, three, or four free neutrons.
4. A typical nuclear fission power plant produces approximately 1.00 GW of electrical power. Assume the plant has an overall efficiency of 40.0% and each fission

reaction produces 200 MeV of energy. Calculate the mass of ^{235}U consumed each day.

5. List the nuclear reactions required to produce ^{233}U from ^{232}Th under fast neutron bombardment.
6. The following fission reaction is typical of those occurring in a nuclear electric generating station:



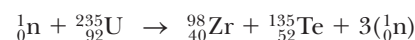
(a) Find the energy released in the reaction. The masses of the products are 140.914 411 u for ${}_{56}^{141}\text{Ba}$ and 91.926 156 u for ${}_{36}^{92}\text{Kr}$. (b) What fraction of the initial rest energy of the system is transformed to other forms?

7. Find the energy released in the fission reaction



8. A 2.00-MeV neutron is emitted in a fission reactor. If it loses half its kinetic energy in each collision with a moderator atom, how many collisions does it undergo as it becomes a thermal neutron, with energy 0.039 eV?

9. Find the energy released in the fission reaction



The atomic masses of the fission products are 97.912 735 u for ${}_{40}^{98}\text{Zr}$ and 134.916 450 u for ${}_{52}^{135}\text{Te}$.

10. Seawater contains 3.00 mg of uranium per cubic meter. (a) Given that the average ocean depth is about 4.00 km and water covers two-thirds of the Earth's surface, estimate the amount of uranium dissolved in the ocean. (b) About 0.700% of naturally occurring uranium is the fissionable isotope ${}^{235}\text{U}$. Estimate how long the uranium in the oceans could supply the world's energy needs at the current usage of 1.50×10^{13} J/s. (c) Where does the dissolved uranium come from? (d) Is it a renewable energy source?

- 11. Review.** Suppose seawater exerts an average frictional drag force of 1.00×10^5 N on a nuclear-powered ship. **AMT** The fuel consists of enriched uranium containing 3.40% of the fissionable isotope ${}^{235}_{92}\text{U}$, and the ship's reactor has an efficiency of 20.0%. Assuming 200 MeV is released per fission event, how far can the ship travel per kilogram of fuel? **M**

Section 45.3 Nuclear Reactors

12. Assume ordinary soil contains natural uranium in an amount of 1 part per million by mass. (a) How much uranium is in the top 1.00 m of soil on a 1-acre (43 560-ft²) plot of ground, assuming the specific gravity of soil is 4.00? (b) How much of the isotope ${}^{235}\text{U}$, appropriate for nuclear reactor fuel, is in this soil? *Hint:* See Table 44.2 for the percent abundance of ${}^{235}\text{U}$. **M**
13. If the reproduction constant is 1.000 25 for a chain reaction in a fission reactor and the average time interval between successive fissions is 1.20 ms, by what factor does the reaction rate increase in one minute?
14. To minimize neutron leakage from a reactor, the ratio of the surface area to the volume should be a minimum. For a given volume V , calculate this ratio for (a) a sphere, (b) a cube, and (c) a parallelepiped of dimensions $a \times a \times 2a$. (d) Which of these shapes would have minimum leakage? Which would have maximum leakage? Explain your answers.
15. The probability of a nuclear reaction increases dramatically when the incident particle is given energy above the "Coulomb barrier," which is the electric potential energy of the two nuclei when their surfaces barely touch. Compute the Coulomb barrier for the absorption of an alpha particle by a gold nucleus.
16. A large nuclear power reactor produces approximately 3 000 MW of power in its core. Three months after a reactor is shut down, the core power from radioactive by-products is 10.0 MW. Assuming each emission delivers 1.00 MeV of energy to the power, find the activity in becquerels three months after the reactor is shut down.

- 17.** According to one estimate, there are 4.40×10^6 metric tons of world uranium reserves extractable at \$130/kg or less. We wish to determine if these reserves **GP**

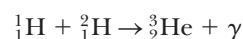
are sufficient to supply all the world's energy needs. About 0.700% of naturally occurring uranium is the fissionable isotope ${}^{235}\text{U}$. (a) Calculate the mass of ${}^{235}\text{U}$ in the reserve in grams. (b) Find the number of moles of ${}^{235}\text{U}$ in the reserve. (c) Find the number of ${}^{235}\text{U}$ nuclei in the reserve. (d) Assuming 200 MeV is obtained from each fission reaction and all this energy is captured, calculate the total energy in joules that can be extracted from the reserve. (e) Assuming the rate of world power consumption remains constant at 1.5×10^{13} J/s, how many years could the uranium reserve provide for all the world's energy needs? (f) What conclusion can be drawn?

18. *Why is the following situation impossible?* An engineer working on nuclear power makes a breakthrough so that he is able to control what daughter nuclei are created in a fission reaction. By carefully controlling the process, he is able to restrict the fission reactions to just this single possibility: the uranium-235 nucleus absorbs a slow neutron and splits into lanthanum-141 and bromine-94. Using this breakthrough, he is able to design and build a successful nuclear reactor in which only this single process occurs.

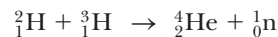
19. An all-electric home uses approximately 2 000 kWh of electric energy per month. How much uranium-235 would be required to provide this house with its energy needs for one year? Assume 100% conversion efficiency and 208 MeV released per fission. **M**
20. A particle cannot generally be localized to distances much smaller than its de Broglie wavelength. This fact can be taken to mean that a slow neutron appears to be larger to a target particle than does a fast neutron in the sense that the slow neutron has probabilities of being found over a larger volume of space. For a thermal neutron at room temperature of 300 K, find (a) the linear momentum and (b) the de Broglie wavelength. (c) State how this effective size compares with both nuclear and atomic dimensions.

Section 45.4 Nuclear Fusion

21. When a star has exhausted its hydrogen fuel, it may fuse other nuclear fuels. At temperatures above 1.00×10^8 K, helium fusion can occur. Consider the following processes. (a) Two alpha particles fuse to produce a nucleus A and a gamma ray. What is nucleus A ? (b) Nucleus A from part (a) absorbs an alpha particle to produce nucleus B and a gamma ray. What is nucleus B ? (c) Find the total energy released in the sequence of reactions given in parts (a) and (b).
22. An all-electric home uses 2 000 kWh of electric energy per month. Assuming all energy released from fusion could be captured, how many fusion events described by the reaction ${}^2_1\text{H} + {}^3_1\text{H} \rightarrow {}^4_2\text{He} + {}^1_0\text{n}$ would be required to keep this home running for one year?
23. Find the energy released in the fusion reaction



24. Two nuclei having atomic numbers Z_1 and Z_2 approach each other with a total energy E . (a) When they are far apart, they interact only by electric repulsion. If they approach to a distance of 1.00×10^{-14} m, the nuclear force suddenly takes over to make them fuse. Find the minimum value of E , in terms of Z_1 and Z_2 , required to produce fusion. (b) State how E depends on the atomic numbers. (c) If $Z_1 + Z_2$ is to have a certain target value such as 60, would it be energetically favorable to take $Z_1 = 1$ and $Z_2 = 59$, or $Z_1 = Z_2 = 30$, or some other choice? Explain your answer. (d) Evaluate from your expression the minimum energy for fusion for the D–D and D–T reactions (the first and third reactions in Eq. 45.4).
25. (a) Consider a fusion generator built to create 3.00 GW of power. Determine the rate of fuel burning in grams per hour if the D–T reaction is used. (b) Do the same for the D–D reaction, assuming the reaction products are split evenly between (n, ${}^3\text{He}$) and (p, ${}^3\text{H}$).
26. **Review.** Consider the deuterium–tritium fusion reaction with the tritium nucleus at rest:



- (a) Suppose the reactant nuclei will spontaneously fuse if their surfaces touch. From Equation 44.1, determine the required distance of closest approach between their centers. (b) What is the electric potential energy (in electron volts) at this distance? (c) Suppose the deuteron is fired straight at an originally stationary tritium nucleus with just enough energy to reach the required distance of closest approach. What is the common speed of the deuterium and tritium nuclei, in terms of the initial deuteron speed v_i , as they touch? (d) Use energy methods to find the minimum initial deuteron energy required to achieve fusion. (e) Why does the fusion reaction actually occur at much lower deuteron energies than the energy calculated in part (d)?
27. Of all the hydrogen in the oceans, 0.030 0% of the mass is deuterium. The oceans have a volume of 317 million mi^3 . (a) If nuclear fusion were controlled and all the deuterium in the oceans were fused to ${}^4_2\text{He}$, how many joules of energy would be released? (b) **What If?** World power consumption is approximately 1.50×10^{13} W. If consumption were 100 times greater, how many years would the energy calculated in part (a) last?
28. It has been suggested that fusion reactors are safe from explosion because the plasma never contains enough energy to do much damage. (a) In 1992, the TFTR reactor, with a plasma volume of approximately 50.0 m^3 , achieved an ion temperature of 4.00×10^8 K, an ion density of $2.00 \times 10^{13} \text{ cm}^{-3}$, and a confinement time of 1.40 s. Calculate the amount of energy stored in the plasma of the TFTR reactor. (b) How many kilograms of water at 27.0°C could be boiled away by this much energy?

29. **M** To understand why plasma containment is necessary, consider the rate at which an unconfined plasma

would be lost. (a) Estimate the rms speed of deuterons in a plasma at a temperature of 4.00×10^8 K. (b) **What If?** Estimate the order of magnitude of the time interval during which such a plasma would remain in a 10.0-cm cube if no steps were taken to contain it.

30. Another series of nuclear reactions that can produce energy in the interior of stars is the carbon cycle first proposed by Hans Bethe in 1939, leading to his Nobel Prize in Physics in 1967. This cycle is most efficient when the central temperature in a star is above 1.6×10^7 K. Because the temperature at the center of the Sun is only 1.5×10^7 K, the following cycle produces less than 10% of the Sun's energy. (a) A high-energy proton is absorbed by ${}^{12}\text{C}$. Another nucleus, A , is produced in the reaction, along with a gamma ray. Identify nucleus A . (b) Nucleus A decays through positron emission to form nucleus B . Identify nucleus B . (c) Nucleus B absorbs a proton to produce nucleus C and a gamma ray. Identify nucleus C . (d) Nucleus C absorbs a proton to produce nucleus D and a gamma ray. Identify nucleus D . (e) Nucleus D decays through positron emission to produce nucleus E . Identify nucleus E . (f) Nucleus E absorbs a proton to produce nucleus F plus an alpha particle. Identify nucleus F . (g) What is the significance of the final nucleus in the last step of the cycle outlined in part (f)?

31. **Review.** To confine a stable plasma, the magnetic energy density in the magnetic field (Eq. 32.14) must exceed the pressure $2nk_B T$ of the plasma by a factor of at least 10. In this problem, assume a confinement time $\tau = 1.00$ s. (a) Using Lawson's criterion, determine the ion density required for the D–T reaction. (b) From the ignition-temperature criterion, determine the required plasma pressure. (c) Determine the magnitude of the magnetic field required to contain the plasma.

Section 45.5 Radiation Damage

32. Assume an x-ray technician takes an average of eight x-rays per workday and receives a dose of 5.0 rem/yr as a result. (a) Estimate the dose in rem per x-ray taken. (b) Explain how the technician's exposure compares with low-level background radiation.
33. When gamma rays are incident on matter, the intensity of the gamma rays passing through the material varies with depth x as $I(x) = I_0 e^{-\mu x}$, where I_0 is the intensity of the radiation at the surface of the material (at $x = 0$) and μ is the linear absorption coefficient. For 0.400-MeV gamma rays in lead, the linear absorption coefficient is 1.59 cm^{-1} . (a) Determine the "half-thickness" for lead, that is, the thickness of lead that would absorb half the incident gamma rays. (b) What thickness reduces the radiation by a factor of 10^4 ?
34. When gamma rays are incident on matter, the intensity of the gamma rays passing through the material varies with depth x as $I(x) = I_0 e^{-\mu x}$, where I_0 is the intensity of the radiation at the surface of the material (at $x = 0$) and μ is the linear absorption coefficient. (a) Determine

the “half-thickness” for a material with linear absorption coefficient μ , that is, the thickness of the material that would absorb half the incident gamma rays. (b) What thickness changes the radiation by a factor of f ?

35. Review. A particular radioactive source produces 100 mrad of 2.00-MeV gamma rays per hour at a distance of 1.00 m from the source. (a) How long could a person stand at this distance before accumulating an intolerable dose of 1.00 rem? (b) **What If?** Assuming the radioactive source is a point source, at what distance would a person receive a dose of 10.0 mrad/h?

36. M A person whose mass is 75.0 kg is exposed to a whole-body dose of 0.250 Gy. How many joules of energy are deposited in the person’s body?

37. Review. The danger to the body from a high dose of gamma rays is not due to the amount of energy absorbed; rather, it is due to the ionizing nature of the radiation. As an illustration, calculate the rise in body temperature that results if a “lethal” dose of 1 000 rad is absorbed strictly as internal energy. Take the specific heat of living tissue as $4\,186\text{ J/kg}\cdot^\circ\text{C}$.

38. Review. *Why is the following situation impossible?* A “clever” technician takes his 20-min coffee break and boils some water for his coffee with an x-ray machine. The machine produces 10.0 rad/s, and the temperature of the water in an insulated cup is initially 50.0°C .

39. W A small building has become accidentally contaminated with radioactivity. The longest-lived material in the building is strontium-90. ($^{90}_{38}\text{Sr}$ has an atomic mass 89.907 7 u, and its half-life is 29.1 yr. It is particularly dangerous because it substitutes for calcium in bones.) Assume the building initially contained 5.00 kg of this substance uniformly distributed throughout the building and the safe level is defined as less than 10.0 decays/min (which is small compared with background radiation). How long will the building be unsafe?

40. Technetium-99 is used in certain medical diagnostic procedures. Assume $1.00 \times 10^{-8}\text{ g}$ of ^{99}Tc is injected into a 60.0-kg patient and half of the 0.140-MeV gamma rays are absorbed in the body. Determine the total radiation dose received by the patient.

41. W To destroy a cancerous tumor, a dose of gamma radiation with a total energy of 2.12 J is to be delivered in 30.0 days from implanted sealed capsules containing palladium-103. Assume this isotope has a half-life of 17.0 d and emits gamma rays of energy 21.0 keV, which are entirely absorbed within the tumor. (a) Find the initial activity of the set of capsules. (b) Find the total mass of radioactive palladium these “seeds” should contain.

42. Strontium-90 from the testing of nuclear bombs can still be found in the atmosphere. Each decay of ^{90}Sr releases 1.10 MeV of energy into the bones of a person who has had strontium replace his or her body’s calcium. Assume a 70.0-kg person receives 1.00 ng of ^{90}Sr from contaminated milk. Take the half-life of ^{90}Sr to

be 29.1 yr. Calculate the absorbed dose rate (in joules per kilogram) in one year.

Section 45.6 Uses of Radiation

43. M When gamma rays are incident on matter, the intensity of the gamma rays passing through the material varies with depth x as $I(x) = I_0 e^{-\mu x}$, where I_0 is the intensity of the radiation at the surface of the material (at $x = 0$) and μ is the linear absorption coefficient. For low-energy gamma rays in steel, take the absorption coefficient to be 0.720 mm^{-1} . (a) Determine the “half-thickness” for steel, that is, the thickness of steel that would absorb half the incident gamma rays. (b) In a steel mill, the thickness of sheet steel passing into a roller is measured by monitoring the intensity of gamma radiation reaching a detector below the rapidly moving metal from a small source immediately above the metal. If the thickness of the sheet changes from 0.800 mm to 0.700 mm, by what percentage does the gamma-ray intensity change?

44. A method called *neutron activation analysis* can be used for chemical analysis at the level of isotopes. When a sample is irradiated by neutrons, radioactive atoms are produced continuously and then decay according to their characteristic half-lives. (a) Assume one species of radioactive nuclei is produced at a constant rate R and its decay is described by the conventional radioactive decay law. Assuming irradiation begins at time $t = 0$, show that the number of radioactive atoms accumulated at time t is

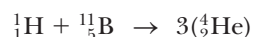
$$N = \frac{R}{\lambda}(1 - e^{-\lambda t})$$

(b) What is the maximum number of radioactive atoms that can be produced?

45. You want to find out how many atoms of the isotope ^{65}Cu are in a small sample of material. You bombard the sample with neutrons to ensure that on the order of 1% of these copper nuclei absorb a neutron. After activation, you turn off the neutron flux and then use a highly efficient detector to monitor the gamma radiation that comes out of the sample. Assume half of the ^{65}Cu nuclei emit a 1.04-MeV gamma ray in their decay. (The other half of the activated nuclei decay directly to the ground state of ^{65}Ni .) If after 10 min (two half-lives) you have detected 1.00×10^4 MeV of photon energy at 1.04 MeV, (a) approximately how many ^{65}Cu atoms are in the sample? (b) Assume the sample contains natural copper. Refer to the isotopic abundances listed in Table 44.2 and estimate the total mass of copper in the sample.


Additional Problems

46. A fusion reaction that has been considered as a source of energy is the absorption of a proton by a boron-11 nucleus to produce three alpha particles:



This reaction is an attractive possibility because boron is easily obtained from the Earth's crust. A disadvantage is that the protons and boron nuclei must have large kinetic energies for the reaction to take place. This requirement contrasts with the initiation of uranium fission by slow neutrons. (a) How much energy is released in each reaction? (b) Why must the reactant particles have high kinetic energies?

47. **Review.** A very slow neutron (with speed approximately equal to zero) can initiate the reaction



The alpha particle moves away with speed 9.25×10^6 m/s. Calculate the kinetic energy of the lithium nucleus. Use nonrelativistic equations.

48. **Review.** The first nuclear bomb was a fissioning mass of plutonium-239 that exploded in the Trinity test before dawn on July 16, 1945, at Alamogordo, New Mexico. Enrico Fermi was 14 km away, lying on the ground facing away from the bomb. After the whole sky had flashed with unbelievable brightness, Fermi stood up and began dropping bits of paper to the ground. They first fell at his feet in the calm and silent air. As the shock wave passed, about 40 s after the explosion, the paper then in flight jumped approximately 2.5 m away from ground zero. (a) Equation 17.10 describes the relationship between the pressure amplitude ΔP_{max} of a sinusoidal air compression wave and its displacement amplitude s_{max} . The compression pulse produced by the bomb explosion was not a sinusoidal wave, but let's use the same equation to compute an estimate for the pressure amplitude, taking $\omega \sim 1 \text{ s}^{-1}$ as an estimate for the angular frequency at which the pulse ramps up and down. (b) Find the change in volume ΔV of a sphere of radius 14 km when its radius increases by 2.5 m. (c) The energy carried by the blast wave is the work done by one layer of air on the next as the wave crest passes. An extension of the logic used to derive Equation 20.8 shows that this work is given by $(\Delta P_{\text{max}})(\Delta V)$. Compute an estimate for this energy. (d) Assume the blast wave carried on the order of one-tenth of the explosion's energy. Make an order-of-magnitude estimate of the bomb yield. (e) One ton of exploding TNT releases 4.2 GJ of energy. What was the order of magnitude of the energy of the Trinity test in equivalent tons of TNT? Fermi's immediate knowledge of the bomb yield agreed with that determined days later by analysis of elaborate measurements.
49. On August 6, 1945, the United States dropped on Hiroshima a nuclear bomb that released 5×10^{13} J of energy, equivalent to that from 12 000 tons of TNT. The fission of one ${}_{92}^{235}\text{U}$ nucleus releases an average of 208 MeV. Estimate (a) the number of nuclei fissioned and (b) the mass of this ${}_{92}^{235}\text{U}$.
50. (a) A student wishes to measure the half-life of a radioactive substance using a small sample. Consecutive clicks of her radiation counter are randomly spaced in time. The counter registers 372 counts during one 5.00-min

interval and 337 counts during the next 5.00 min. The average background rate is 15 counts per minute. Find the most probable value for the half-life. (b) Estimate the uncertainty in the half-life determination in part (a). Explain your reasoning.

51. In a Geiger–Mueller tube for detecting radiation (see **M** Problem 68 in Chapter 25), the voltage between the electrodes is typically 1.00 kV and the current pulse discharges a 5.00-pF capacitor. (a) What is the energy amplification of this device for a 0.500-MeV electron? (b) How many electrons participate in the avalanche caused by the single initial electron?

52. **Review.** Consider a nucleus at rest, which then spontaneously splits into two fragments of masses m_1 and m_2 . (a) Show that the fraction of the total kinetic energy carried by fragment m_1 is

$$\frac{K_1}{K_{\text{tot}}} = \frac{m_2}{m_1 + m_2}$$


and the fraction carried by m_2 is

$$\frac{K_2}{K_{\text{tot}}} = \frac{m_1}{m_1 + m_2}$$

assuming relativistic corrections can be ignored. A stationary ${}_{92}^{236}\text{U}$ nucleus fissions spontaneously into two primary fragments, ${}_{35}^{87}\text{Br}$ and ${}_{57}^{149}\text{La}$. (b) Calculate the disintegration energy. The required atomic masses are 86.920 711 u for ${}_{35}^{87}\text{Br}$, 148.934 370 u for ${}_{57}^{149}\text{La}$, and 236.045 562 u for ${}_{92}^{236}\text{U}$. (c) How is the disintegration energy split between the two primary fragments? (d) Calculate the speed of each fragment immediately after the fission.

53. Consider the carbon cycle in Problem 30. (a) Calculate the Q value for each of the six steps in the carbon cycle listed in Problem 30. (b) In the second and fifth steps of the cycle, the positron that is ejected combines with an electron to form two photons. The energies of these photons must be included in the energy released in the cycle. How much energy is released by these annihilations in each of the two steps? (c) What is the overall energy released in the carbon cycle? (d) Do you think that the energy carried off by the neutrinos is deposited in the star? Explain.
54. A fission reactor is hit by a missile, and 5.00×10^6 Ci of ${}_{90}\text{Sr}$, with half-life 29.1 yr, evaporates into the air. The strontium falls out over an area of 10^4 km². After what time interval will the activity of the ${}_{90}\text{Sr}$ reach the agriculturally "safe" level of $2.00 \mu\text{Ci}/\text{m}^2$?
55. The alpha-emitter plutonium-238 (${}_{94}^{238}\text{Pu}$, atomic mass **W** 238.049 560 u, half-life 87.7 yr) was used in a nuclear energy source on the Apollo Lunar Surface Experiments Package (Fig. P45.55, page 1444). The energy source, called the Radioisotope Thermoelectric Generator, is the small gray object to the left of the gold-shrouded Central Station in the photograph. Assume the source contains 3.80 kg of ${}_{94}^{238}\text{Pu}$ and the efficiency

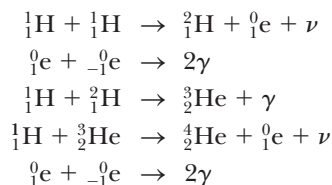
for conversion of radioactive decay energy to energy transferred by electrical transmission is 3.20%. Determine the initial power output of the source.



NASA Johnson Space Center Collection

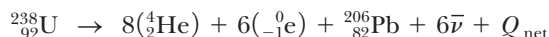
Figure P45.55

(b) One chain of reactions in the proton–proton cycle in the Sun’s core is



Based on part (a), what is Q_{net} for this sequence?

60. Natural uranium must be processed to produce uranium enriched in ${}^{235}\text{U}$ for weapons and power plants. The processing yields a large quantity of nearly pure ${}^{238}\text{U}$ as a by-product, called “depleted uranium.” Because of its high mass density, ${}^{238}\text{U}$ is used in armor-piercing artillery shells. (a) Find the edge dimension of a 70.0-kg cube of ${}^{238}\text{U}$ ($\rho = 19.1 \times 10^3 \text{ kg/m}^3$). (b) The isotope ${}^{238}\text{U}$ has a long half-life of $4.47 \times 10^9 \text{ yr}$. As soon as one nucleus decays, a relatively rapid series of 14 steps begins that together constitute the net reaction



Find the net decay energy. (Refer to Table 44.2.)

(c) Argue that a radioactive sample with decay rate R and decay energy Q has power output $P = QR$. (d) Consider an artillery shell with a jacket of 70.0 kg of ${}^{238}\text{U}$. Find its power output due to the radioactivity of the uranium and its daughters. Assume the shell is old enough that the daughters have reached steady-state amounts. Express the power in joules per year. (e) **What If?** A 17-year-old soldier of mass 70.0 kg works in an arsenal where many such artillery shells are stored. Assume his radiation exposure is limited to 5.00 rem per year. Find the rate in joules per year at which he can absorb energy of radiation. Assume an average RBE factor of 1.10.

61. Suppose the target in a laser fusion reactor is a sphere of solid hydrogen that has a diameter of $1.50 \times 10^{-4} \text{ m}$ and a density of 0.200 g/cm^3 . Assume half of the nuclei are ${}^2\text{H}$ and half are ${}^3\text{H}$. (a) If 1.00% of a 200-kJ laser pulse is delivered to this sphere, what temperature does the sphere reach? (b) If all the hydrogen fuses according to the D–T reaction, how many joules of energy are released?

62. When photons pass through matter, the intensity I of the beam (measured in watts per square meter) decreases exponentially according to

$$I = I_0 e^{-\mu x}$$

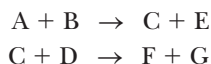
where I is the intensity of the beam that just passed through a thickness x of material and I_0 is the intensity of the incident beam. The constant μ is known as the linear absorption coefficient, and its value depends on the absorbing material and the wavelength of the pho-

56. The half-life of tritium is 12.3 yr. (a) If the TFTR fusion reactor contained 50.0 m^3 of tritium at a density equal to $2.00 \times 10^{14} \text{ ions/cm}^3$, how many curies of tritium were in the plasma? (b) State how this value compares with a fission inventory (the estimated supply of fissionable material) of $4.00 \times 10^{10} \text{ Ci}$.

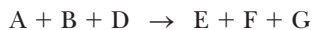
57. **Review.** A nuclear power plant operates by using the energy released in nuclear fission to convert 20°C water into 400°C steam. How much water could theoretically be converted to steam by the complete fissioning of 1.00 g of ${}^{235}\text{U}$ at 200 MeV/fission ?

58. **Review.** A nuclear power plant operates by using the energy released in nuclear fission to convert liquid water at T_c into steam at T_h . How much water could theoretically be converted to steam by the complete fissioning of a mass m of ${}^{235}\text{U}$ if the energy released per fission event is E ?

59. Consider the two nuclear reactions



(a) Show that the net disintegration energy for these two reactions ($Q_{\text{net}} = Q_{\text{I}} + Q_{\text{II}}$) is identical to the disintegration energy for the net reaction




ton beam. This wavelength (or energy) dependence allows us to filter out unwanted wavelengths from a broad-spectrum x-ray beam. (a) Two x-ray beams of wavelengths λ_1 and λ_2 and equal incident intensities pass through the same metal plate. Show that the ratio of the emergent beam intensities is

$$\frac{I_2}{I_1} = e^{-(\mu_2 - \mu_1)x}$$


(b) Compute the ratio of intensities emerging from an aluminum plate 1.00 mm thick if the incident beam contains equal intensities of 50 pm and 100 pm x-rays. The values of μ for aluminum at these two wavelengths are $\mu_1 = 5.40 \text{ cm}^{-1}$ at 50 pm and $\mu_2 = 41.0 \text{ cm}^{-1}$ at 100 pm. (c) Repeat part (b) for an aluminum plate 10.0 mm thick.

- 63.** Assume a deuteron and a triton are at rest when they fuse according to the reaction



Determine the kinetic energy acquired by the neutron.

- 64.** (a) Calculate the energy (in kilowatt-hours) released if 1.00 kg of ${}^{239}\text{Pu}$ undergoes complete fission and the energy released per fission event is 200 MeV. (b) Calculate the energy (in electron volts) released in the deuterium–tritium fusion reaction

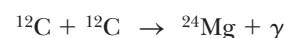


(c) Calculate the energy (in kilowatt-hours) released if 1.00 kg of deuterium undergoes fusion according to this reaction. (d) **What If?** Calculate the energy (in kilowatt-hours) released by the combustion of 1.00 kg of carbon in coal if each $\text{C} + \text{O}_2 \rightarrow \text{CO}_2$ reaction yields 4.20 eV. (e) List advantages and disadvantages of each of these methods of energy generation.

- 65.** Consider a 1.00-kg sample of natural uranium composed primarily of ${}^{238}\text{U}$, a smaller amount (0.720% by mass) of ${}^{235}\text{U}$, and a trace (0.005 00%) of ${}^{234}\text{U}$, which has a half-life of 2.44×10^5 yr. (a) Find the activity in curies due to each of the isotopes. (b) What fraction of the total activity is due to each isotope? (c) Explain whether the activity of this sample is dangerous.
- 66.** Approximately 1 of every 3 300 water molecules contains one deuterium atom. (a) If all the deuterium nuclei in 1 L of water are fused in pairs according to the D–D fusion reaction ${}^2_1\text{H} + {}^2_1\text{H} \rightarrow {}^3_2\text{He} + {}^1_0\text{n} + 3.27 \text{ MeV}$, how much energy in joules is liberated? (b) **What If?** Burning gasoline produces approximately $3.40 \times 10^7 \text{ J/L}$. State how the energy obtainable from the fusion of the deuterium in 1 L of water compares with the energy liberated from the burning of 1 L of gasoline.

- 67.** Carbon detonations are powerful nuclear reactions that temporarily tear apart the cores inside massive

stars late in their lives. These blasts are produced by carbon fusion, which requires a temperature of approximately $6 \times 10^8 \text{ K}$ to overcome the strong Coulomb repulsion between carbon nuclei. (a) Estimate the repulsive energy barrier to fusion, using the temperature required for carbon fusion. (In other words, what is the average kinetic energy of a carbon nucleus at $6 \times 10^8 \text{ K}$?) (b) Calculate the energy (in MeV) released in each of these “carbon-burning” reactions:



(c) Calculate the energy in kilowatt-hours given off when 2.00 kg of carbon completely fuse according to the first reaction.

- 68.** A sealed capsule containing the radiopharmaceutical phosphorus-32, an e^- emitter, is implanted into a patient’s tumor. The average kinetic energy of the beta particles is 700 keV. The initial activity is 5.22 MBq. Assume the beta particles are completely absorbed in 100 g of tissue. Determine the absorbed dose during a 10.0-day period.
- 69.** A certain nuclear plant generates internal energy at a rate of 3.065 GW and transfers energy out of the plant by electrical transmission at a rate of 1.000 GW. Of the waste energy, 3.0% is ejected to the atmosphere and the remainder is passed into a river. A state law requires that the river water be warmed by no more than 3.50°C when it is returned to the river. (a) Determine the amount of cooling water necessary (in kilograms per hour and cubic meters per hour) to cool the plant. (b) Assume fission generates $7.80 \times 10^{10} \text{ J/g}$ of ${}^{235}\text{U}$. Determine the rate of fuel burning (in kilograms per hour) of ${}^{235}\text{U}$.
- 70.** The Sun radiates energy at the rate of $3.85 \times 10^{26} \text{ W}$. Suppose the net reaction $4({}^1_1\text{H}) + 2({}^0_{-1}\text{e}) \rightarrow {}^4_2\text{He} + 2\nu + \gamma$ accounts for all the energy released. Calculate the number of protons fused per second.

Challenge Problems

- 71.** During the manufacture of a steel engine component, radioactive iron (${}^{59}\text{Fe}$) with a half-life of 45.1 d is included in the total mass of 0.200 kg. The component is placed in a test engine when the activity due to this isotope is $20.0 \mu\text{Ci}$. After a 1 000-h test period, some of the lubricating oil is removed from the engine and found to contain enough ${}^{59}\text{Fe}$ to produce 800 disintegrations/min/L of oil. The total volume of oil in the engine is 6.50 L. Calculate the total mass worn from the engine component per hour of operation.
- 72.** (a) At time $t = 0$, a sample of uranium is exposed to a neutron source that causes N_0 nuclei to undergo fission. The sample is in a supercritical state, with a reproduction constant $K > 1$. A chain reaction occurs that

proliferates fission throughout the mass of uranium. The chain reaction can be thought of as a succession of *generations*. The N_0 fissions produced initially are the zeroth generation of fissions. From this generation, $N_0 K$ neutrons go off to produce fission of new uranium nuclei. The $N_0 K$ fissions that occur subsequently are the first generation of fissions, and from this generation $N_0 K^2$ neutrons go in search of uranium nuclei in which to cause fission. The subsequent $N_0 K^2$ fissions are the second generation of fissions. This process can continue until all the uranium nuclei have fissioned. Show that the cumulative total of fissions N that have occurred up to and including the n th generation after the zeroth generation is given by

$$N = N_0 \left(\frac{K^{n+1} - 1}{K - 1} \right)$$

(b) Consider a hypothetical uranium weapon made from 5.50 kg of isotopically pure ^{235}U . The chain reaction has a reproduction constant of 1.10 and starts with a zeroth generation of 1.00×10^{20} fissions. The average time interval between one fission generation and the next is 10.0 ns. How long after the zeroth generation does it take the uranium in this weapon to fission completely? (c) Assume the bulk modulus of uranium is 150 GPa. Find the speed of sound in uranium. You may ignore the density difference between ^{235}U and natural uranium. (d) Find the time interval required for a compressional wave to cross the radius of a 5.50-kg sphere of uranium. This time interval indicates how quickly the motion of explosion begins. (e) Fission must occur in a time interval that is short compared with that in part (d); otherwise, most of the uranium will disperse in small chunks without

having fissioned. Can the weapon considered in part (b) release the explosive energy of all its uranium? If so, how much energy does it release in equivalent tons of TNT? Assume one ton of TNT releases 4.20 GJ and each uranium fission releases 200 MeV of energy.

73. Assume a photomultiplier tube for detecting radiation has seven dynodes with potentials of 100, 200, 300, . . . , 700 V as shown in Figure P45.73. The average energy required to free an electron from the dynode surface is 10.0 eV. Assume only one electron is incident and the tube functions with 100% efficiency. (a) How many electrons are freed at the first dynode at 100 V? (b) How many electrons are collected at the last dynode? (c) What is the energy available to the counter for all the electrons arriving at the last dynode?

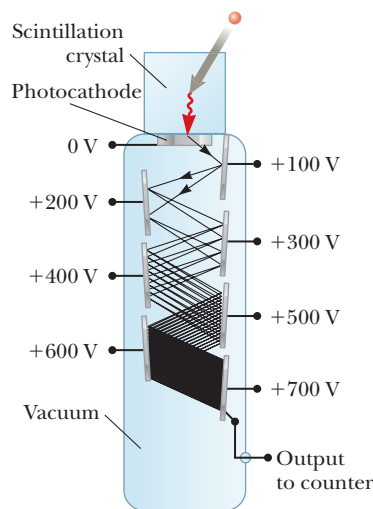



Figure P45.73

Particle Physics and Cosmology

CHAPTER

46



- 46.1 The Fundamental Forces in Nature
- 46.2 Positrons and Other Antiparticles
- 46.3 Mesons and the Beginning of Particle Physics
- 46.4 Classification of Particles
- 46.5 Conservation Laws
- 46.6 Strange Particles and Strangeness
- 46.7 Finding Patterns in the Particles
- 46.8 Quarks
- 46.9 Multicolored Quarks
- 46.10 The Standard Model
- 46.11 The Cosmic Connection
- 46.12 Problems and Perspectives

The word *atom* comes from the Greek *atomos*, which means “indivisible.” The early Greeks believed that atoms were the indivisible constituents of matter; that is, they regarded them as elementary particles. After 1932, physicists viewed all matter as consisting of three constituent particles: electrons, protons, and neutrons. Beginning in the 1940s, many “new” particles were discovered in experiments involving high-energy collisions between known particles. The new particles are characteristically very unstable and have very short half-lives, ranging between 10^{-6} s and 10^{-23} s. So far, more than 300 of these particles have been catalogued.

Until the 1960s, physicists were bewildered by the great number and variety of subatomic particles that were being discovered. They wondered whether the particles had no systematic relationship connecting them or whether a pattern was emerging that would provide a better understanding of the elaborate structure in the subatomic world. For example, that the neutron has a magnetic moment despite having zero electric charge (Section 44.8) suggests an underlying structure to the neutron. The periodic table explains how more than 100 elements can be formed from three types of particles (electrons, protons, and

One of the most intense areas of current research is the hunt for the Higgs boson, discussed in Section 46.10. The photo shows an event recorded at the Large Hadron Collider in July 2012 that shows particles consistent with the creation of a Higgs boson. The data is not entirely conclusive, however, and the hunt continues. (CERN)

neutrons), which suggests there is, perhaps, a means of forming more than 300 subatomic particles from a small number of basic building blocks.

Recall Figure 1.2, which illustrated the various levels of structure in matter. We studied the atomic structure of matter in Chapter 42. In Chapter 44, we investigated the substructure of the atom by describing the structure of the nucleus. As mentioned in Section 1.2, the protons and neutrons in the nucleus, and a host of other exotic particles, are now known to be composed of six different varieties of particles called *quarks*. In this concluding chapter, we examine the current theory of elementary particles, in which all matter is constructed from only two families of particles, quarks and leptons. We also discuss how clarifications of such models might help scientists understand the birth and evolution of the Universe.

46.1 The Fundamental Forces in Nature

As noted in Section 5.1, all natural phenomena can be described by four fundamental forces acting between particles. In order of decreasing strength, they are the nuclear force, the electromagnetic force, the weak force, and the gravitational force.

The nuclear force discussed in Chapter 44 is an attractive force between nucleons. It has a very short range and is negligible for separation distances between nucleons greater than approximately 10^{-15} m (about the size of the nucleus). The electromagnetic force, which binds atoms and molecules together to form ordinary matter, has a strength of approximately 10^{-2} times that of the nuclear force. This long-range force decreases in magnitude as the inverse square of the separation between interacting particles. The weak force is a short-range force that tends to produce instability in certain nuclei. It is responsible for decay processes, and its strength is only about 10^{-5} times that of the nuclear force. Finally, the gravitational force is a long-range force that has a strength of only about 10^{-39} times that of the nuclear force. Although this familiar interaction is the force that holds the planets, stars, and galaxies together, its effect on elementary particles is negligible.

In Section 13.3, we discussed the difficulty early scientists had with the notion of the gravitational force acting at a distance, with no physical contact between the interacting objects. To resolve this difficulty, the concept of the gravitational field was introduced. Similarly, in Chapter 23, we introduced the electric field to describe the electric force acting between charged objects, and we followed that with a discussion of the magnetic field in Chapter 29. For each of these types of fields, we developed a particle in a field analysis model. In modern physics, the nature of the interaction between particles is carried a step further. These interactions are described in terms of the exchange of entities called **field particles** or **exchange particles**. Field particles are also called **gauge bosons**.¹ The interacting particles continuously emit and absorb field particles. The emission of a field particle by one particle and its absorption by another manifests as a force between the two interacting particles. In the case of the electromagnetic interaction, for instance, the field particles are photons. In the language of modern physics, the electromagnetic force is said to be *mediated* by photons, and photons are the field particles of the electromagnetic field. Likewise, the nuclear force is mediated by field particles called *gluons*. The weak force is mediated by field particles called *W* and *Z bosons*, and the gravitational force is proposed to be mediated by field particles called *gravitons*. These interactions, their ranges, and their relative strengths are summarized in Table 46.1.

¹The word *bosons* suggests that the field particles have integral spin as discussed in Section 43.8. The word *gauge* comes from *gauge theory*, which is a sophisticated mathematical analysis that is beyond the scope of this book.

Table 46.1 Particle Interactions

Interactions	Relative Strength	Range of Force	Mediating Field Particle	Mass of Field Particle (GeV/c ²)
Nuclear	1	Short (≈ 1 fm)	Gluon	0
Electromagnetic	10^{-2}	∞	Photon	0
Weak	10^{-5}	Short ($\approx 10^{-3}$ fm)	W^\pm, Z^0 bosons	80.4, 80.4, 91.2
Gravitational	10^{-39}	∞	Graviton	0

46.2 Positrons and Other Antiparticles


In the 1920s, Paul Dirac developed a relativistic quantum-mechanical description of the electron that successfully explained the origin of the electron's spin and its magnetic moment. His theory had one major problem, however: its relativistic wave equation required solutions corresponding to negative energy states, and if negative energy states existed, an electron in a state of positive energy would be expected to make a rapid transition to one of these states, emitting a photon in the process.

Dirac circumvented this difficulty by postulating that all negative energy states are filled. The electrons occupying these negative energy states are collectively called the *Dirac sea*. Electrons in the Dirac sea (the blue area in Fig. 46.1) are not directly observable because the Pauli exclusion principle does not allow them to react to external forces; there are no available states to which an electron can make a transition in response to an external force. Therefore, an electron in such a state acts as an isolated system unless an interaction with the environment is strong enough to excite the electron to a positive energy state. Such an excitation causes one of the negative energy states to be vacant as in Figure 46.1, leaving a hole in the sea of filled states. This process is described by the nonisolated system model: as energy enters the system by some transfer mechanism, the system energy increases and the electron is excited to a higher energy level. *The hole can react to external forces and is observable.* The hole reacts in a way similar to that of the electron except that it has a positive charge: it is the *antiparticle* to the electron.

This theory strongly suggested that *an antiparticle exists for every particle*, not only for fermions such as electrons but also for bosons. It has subsequently been verified that practically every known elementary particle has a distinct antiparticle. Among the exceptions are the photon and the neutral pion (π^0 ; see Section 46.3). Following the construction of high-energy accelerators in the 1950s, many other antiparticles were revealed. They included the antiproton, discovered by Emilio Segré (1905–1989) and Owen Chamberlain (1920–2006) in 1955, and the antineutron, discovered shortly thereafter. The antiparticle for a charged particle has the same mass as the particle but opposite charge.² For example, the electron's antiparticle (the *positron* mentioned in Section 44.4) has a rest energy of 0.511 MeV and a positive charge of $+1.60 \times 10^{-19}$ C.

Carl Anderson (1905–1991) observed the positron experimentally in 1932 and was awarded a Nobel Prize in Physics in 1936 for this achievement. Anderson discovered the positron while examining tracks created in a cloud chamber by electron-like particles of positive charge. (These early experiments used cosmic rays—mostly energetic protons passing through interstellar space—to initiate high-energy reactions on the order of several GeV.) To discriminate between positive and negative charges, Anderson placed the cloud chamber in a magnetic field,

²Antiparticles for uncharged particles, such as the neutron, are a little more difficult to describe. One basic process that can detect the existence of an antiparticle is pair annihilation. For example, a neutron and an antineutron can annihilate to form two gamma rays. Because the photon and the neutral pion do not have distinct antiparticles, pair annihilation is not observed with either of these particles.



© INTERFOTO/Alamy

Paul Adrien Maurice Dirac
British Physicist (1902–1984)

Dirac was instrumental in the understanding of antimatter and the unification of quantum mechanics and relativity. He made many contributions to the development of quantum physics and cosmology. In 1933, Dirac won a Nobel Prize in Physics.

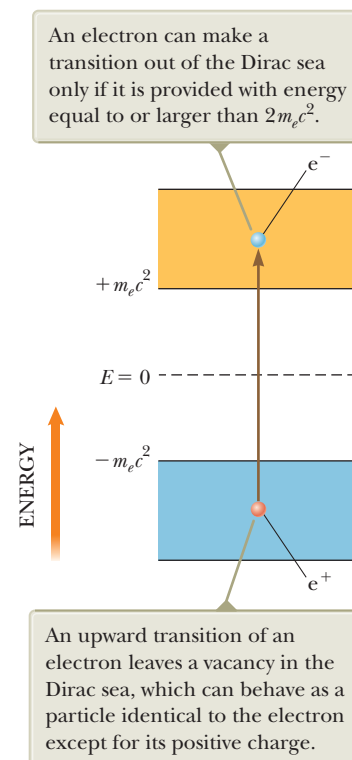
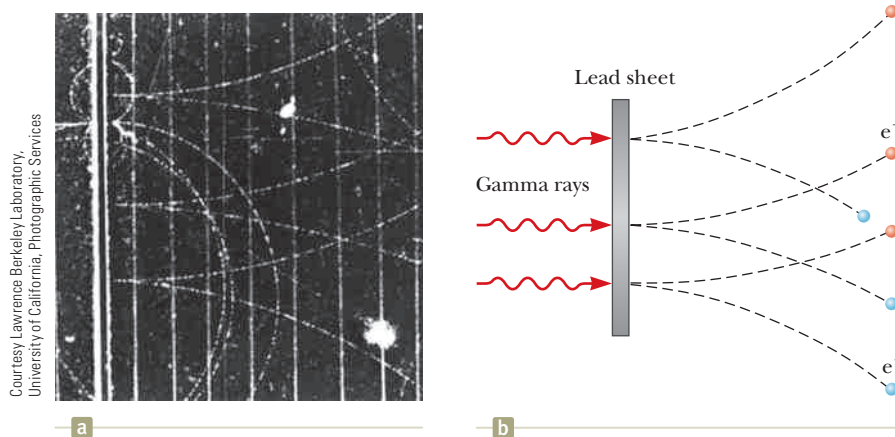


Figure 46.1 Dirac's model for the existence of antielectrons (positrons). The minimum energy for an electron to exist in the gold band is its rest energy $m_e c^2$. The blue band of negative energies is filled with electrons.

Figure 46.2 (a) Bubble-chamber tracks of electron–positron pairs produced by 300-MeV gamma rays striking a lead sheet from the left. (b) The pertinent pair-production events. The positrons deflect upward and the electrons downward in an applied magnetic field.



Pitfall Prevention 46.1

Antiparticles An antiparticle is not identified solely on the basis of opposite charge; even neutral particles have antiparticles, which are defined in terms of other properties, such as spin.

causing moving charges to follow curved paths. He noted that some of the electron-like tracks deflected in a direction corresponding to a positively charged particle.

Since Anderson's discovery, positrons have been observed in a number of experiments. A common source of positrons is **pair production**. In this process, a gamma-ray photon with sufficiently high energy interacts with a nucleus and an electron–positron pair is created from the photon. (The presence of the nucleus allows the principle of conservation of momentum to be satisfied.) Because the total rest energy of the electron–positron pair is $2m_e c^2 = 1.02 \text{ MeV}$ (where m_e is the mass of the electron), the photon must have at least this much energy to create an electron–positron pair. The energy of a photon is converted to rest energy of the electron and positron in accordance with Einstein's relationship $E_R = mc^2$. If the gamma-ray photon has energy in excess of the rest energy of the electron–positron pair, the excess appears as kinetic energy of the two particles. Figure 46.2 shows early observations of tracks of electron–positron pairs in a bubble chamber created by 300-MeV gamma rays striking a lead sheet.

Quick Quiz 46.1 Given the identification of the particles in Figure 46.2b, is the direction of the external magnetic field in Figure 46.2a (a) into the page, (b) out of the page, or (c) impossible to determine?

The reverse process can also occur. Under the proper conditions, an electron and a positron can annihilate each other to produce two gamma-ray photons that have a combined energy of at least 1.02 MeV:



Because the initial momentum of the electron–positron system is approximately zero, the two gamma rays travel in opposite directions after the annihilation, satisfying the principle of conservation of momentum for the isolated system.

Electron–positron annihilation is used in the medical diagnostic technique called *positron-emission tomography* (PET). The patient is injected with a glucose solution containing a radioactive substance that decays by positron emission, and the material is carried throughout the body by the blood. A positron emitted during a decay event in one of the radioactive nuclei in the glucose solution annihilates with an electron in the surrounding tissue, resulting in two gamma-ray photons emitted in opposite directions. A gamma detector surrounding the patient pinpoints the source of the photons and, with the assistance of a computer, displays an image of the sites at which the glucose accumulates. (Glucose metabolizes rapidly in cancerous tumors and accumulates at those sites, providing a strong signal for a PET detector system.) The images from a PET scan can indicate a wide variety of disorders in the brain, including Alzheimer's disease (Fig. 46.3). In addition, because glucose metabolizes more rapidly in active areas

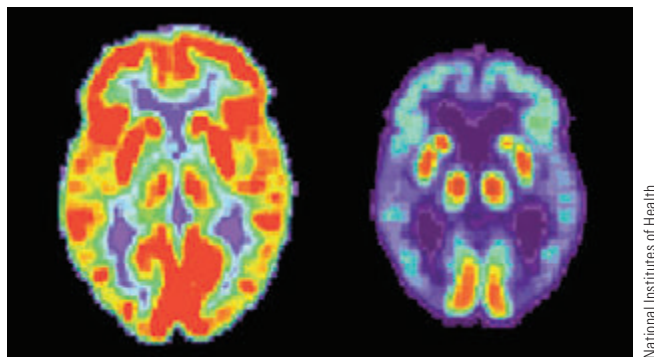


Figure 46.3 PET scans of the brain of a healthy older person (*left*) and that of a patient suffering from Alzheimer's disease (*right*). Lighter regions contain higher concentrations of radioactive glucose, indicating higher metabolism rates and therefore increased brain activity.


of the brain, a PET scan can indicate areas of the brain involved in the activities in which the patient is engaging at the time of the scan, such as language use, music, and vision.

46.3 Mesons and the Beginning of Particle Physics

Physicists in the mid-1930s had a fairly simple view of the structure of matter. The building blocks were the proton, the electron, and the neutron. Three other particles were either known or postulated at the time: the photon, the neutrino, and the positron. Together these six particles were considered the fundamental constituents of matter. With this simple picture, however, no one was able to answer the following important question: the protons in any nucleus should strongly repel one another due to their charges of the same sign, so what is the nature of the force that holds the nucleus together? Scientists recognized that this mysterious force must be much stronger than anything encountered in nature up to that time. This force is the nuclear force discussed in Section 44.1 and examined in historical perspective in the following paragraphs.

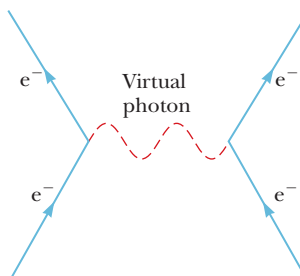
The first theory to explain the nature of the nuclear force was proposed in 1935 by Japanese physicist Hideki Yukawa, an effort that earned him a Nobel Prize in Physics in 1949. To understand Yukawa's theory, recall the introduction of field particles in Section 46.1, which stated that each fundamental force is mediated by a field particle exchanged between the interacting particles. Yukawa used this idea to explain the nuclear force, proposing the existence of a new particle whose exchange between nucleons in the nucleus causes the nuclear force. He established that the range of the force is inversely proportional to the mass of this particle and predicted the mass to be approximately 200 times the mass of the electron. (Yukawa's predicted particle is *not* the gluon mentioned in Section 46.1, which is massless and is today considered to be the field particle for the nuclear force.) Because the new particle would have a mass between that of the electron and that of the proton, it was called a **meson** (from the Greek *meso*, "middle").

In efforts to substantiate Yukawa's predictions, physicists began experimental searches for the meson by studying cosmic rays entering the Earth's atmosphere. In 1937, Carl Anderson and his collaborators discovered a particle of mass $106 \text{ MeV}/c^2$, approximately 207 times the mass of the electron. This particle was thought to be Yukawa's meson. Subsequent experiments, however, showed that the particle interacted very weakly with matter and hence could not be the field particle for the nuclear force. That puzzling situation inspired several theoreticians to propose two mesons having slightly different masses equal to approximately 200 times that of the electron, one having been discovered by Anderson and the other, still undiscovered, predicted by Yukawa. This idea was confirmed in 1947 with the discovery of the **pi meson** (π), or simply **pion**. The particle discovered by Anderson in 1937, the one initially thought to be Yukawa's meson, is not really a



Hideki Yukawa
Japanese Physicist (1907–1981)
Yukawa was awarded the Nobel Prize in Physics in 1949 for predicting the existence of mesons. This photograph of him at work was taken in 1950 in his office at Columbia University. Yukawa came to Columbia in 1949 after spending the early part of his career in Japan.

Figure 46.4 Feynman diagram representing a photon mediating the electromagnetic force between two electrons.



meson. (We shall discuss the characteristics of mesons in Section 46.4.) Instead, it takes part in the weak and electromagnetic interactions only and is now called the **muon** (μ).

The pion comes in three varieties, corresponding to three charge states: π^+ , π^- , and π^0 . The π^+ and π^- particles (π^- is the antiparticle of π^+) each have a mass of $139.6 \text{ MeV}/c^2$, and the π^0 mass is $135.0 \text{ MeV}/c^2$. Two muons exist: μ^- and its antiparticle μ^+ .

Pions and muons are very unstable particles. For example, the π^- , which has a mean lifetime of $2.6 \times 10^{-8} \text{ s}$, decays to a muon and an antineutrino.³ The muon, which has a mean lifetime of $2.2 \mu\text{s}$, then decays to an electron, a neutrino, and an antineutrino:




For chargeless particles (as well as some charged particles, such as the proton), a bar over the symbol indicates an antiparticle, as for the neutrino in beta decay (see Section 44.5). Other antiparticles, such as e^+ and μ^+ , use a different notation.

The interaction between two particles can be represented in a simple diagram called a **Feynman diagram**, developed by American physicist Richard P. Feynman. Figure 46.4 is such a diagram for the electromagnetic interaction between two electrons. A Feynman diagram is a qualitative graph of time on the vertical axis versus space on the horizontal axis. It is qualitative in the sense that the actual values of time and space are not important, but the overall appearance of the graph provides a pictorial representation of the process.

In the simple case of the electron–electron interaction in Figure 46.4, a photon (the field particle) mediates the electromagnetic force between the electrons. Notice that the entire interaction is represented in the diagram as occurring at a single point in time. Therefore, the paths of the electrons appear to undergo a discontinuous change in direction at the moment of interaction. The electron paths shown in Figure 46.4 are different from the *actual* paths, which would be curved due to the continuous exchange of large numbers of field particles.

In the electron–electron interaction, the photon, which transfers energy and momentum from one electron to the other, is called a *virtual photon* because it vanishes during the interaction without having been detected. In Chapter 40, we discussed that a photon has energy $E = hf$, where f is its frequency. Consequently, for a system of two electrons initially at rest, the system has energy $2m_e c^2$ before a virtual photon is released and energy $2m_e c^2 + hf$ after the virtual photon is released (plus any kinetic energy of the electron resulting from the emission of the photon). Is that a violation of the law of conservation of energy for an isolated system? No; this process does *not* violate the law of conservation of energy because the virtual



© Shelly Gazim/CORBIS

Richard Feynman

American Physicist (1918–1988)

Inspired by Dirac, Feynman developed quantum electrodynamics, the theory of the interaction of light and matter on a relativistic and quantum basis. In 1965, Feynman won the Nobel Prize in Physics. The prize was shared by Feynman, Julian Schwinger, and Sin Itiro Tomonaga. Early in Feynman's career, he was a leading member of the team developing the first nuclear weapon in the Manhattan Project. Toward the end of his career, he worked on the commission investigating the 1986 *Challenger* tragedy and demonstrated the effects of cold temperatures on the rubber O-rings used in the space shuttle.

³The antineutrino is another zero-charge particle for which the identification of the antiparticle is more difficult than that for a charged particle. Although the details are beyond the scope of this book, the neutrino and antineutrino can be differentiated by means of the relationship between the linear momentum and the spin angular momentum of the particles.

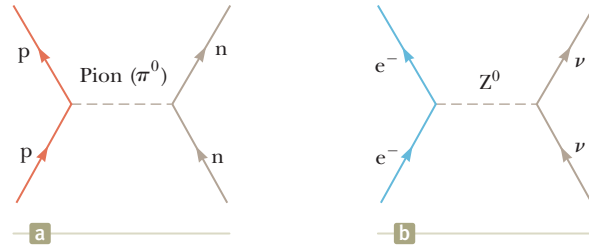


Figure 46.5 (a) Feynman diagram representing a proton and a neutron interacting via the nuclear force with a neutral pion mediating the force. (This model is *not* the current model for nucleon interaction.) (b) Feynman diagram for an electron and a neutrino interacting via the weak force, with a Z^0 boson mediating the force.

photon has a very short lifetime Δt that makes the uncertainty in the energy $\Delta E \approx \hbar/2 \Delta t$ of the system greater than the photon energy. Therefore, within the constraints of the uncertainty principle, the energy of the system is conserved.

Now consider a pion exchange between a proton and a neutron according to Yukawa's model (Fig. 46.5a). The energy ΔE_R needed to create a pion of mass m_π is given by Einstein's equation $\Delta E_R = m_\pi c^2$. As with the photon in Figure 46.4, the very existence of the pion would appear to violate the law of conservation of energy if the particle existed for a time interval greater than $\Delta t \approx \hbar/2 \Delta E_R$ (from the uncertainty principle), where Δt is the time interval required for the pion to transfer from one nucleon to the other. Therefore,

$$\Delta t \approx \frac{\hbar}{2 \Delta E_R} = \frac{\hbar}{2 m_\pi c^2}$$

and the rest energy of the pion is

$$m_\pi c^2 = \frac{\hbar}{2 \Delta t} \quad (46.2)$$

Because the pion cannot travel faster than the speed of light, the maximum distance d it can travel in a time interval Δt is $c \Delta t$. Therefore, using Equation 46.2 and $d = c \Delta t$, we find

$$m_\pi c^2 = \frac{\hbar c}{2d} \quad (46.3)$$

From Table 46.1, we know that the range of the nuclear force is on the order of 10^{-15} fm. Using this value for d in Equation 46.3, we estimate the rest energy of the pion to be

$$\begin{aligned} m_\pi c^2 &\approx \frac{(1.055 \times 10^{-34} \text{ J} \cdot \text{s})(3.00 \times 10^8 \text{ m/s})}{2(1 \times 10^{-15} \text{ m})} \\ &= 1.6 \times 10^{-11} \text{ J} \approx 100 \text{ MeV} \end{aligned}$$

which corresponds to a mass of $100 \text{ MeV}/c^2$ (approximately 200 times the mass of the electron). This value is in reasonable agreement with the observed pion mass.

The concept just described is quite revolutionary. In effect, it says that a system of two nucleons can change into two nucleons plus a pion as long as it returns to its original state in a very short time interval. (Remember that this description is the older historical model, which assumes the pion is the field particle for the nuclear force; the gluon is the actual field particle in current models.) Physicists often say that a nucleon undergoes *fluctuations* as it emits and absorbs field particles. These fluctuations are a consequence of a combination of quantum mechanics (through the uncertainty principle) and special relativity (through Einstein's energy–mass relationship $E_R = mc^2$).

Pitfall Prevention 46.2

The Nuclear Force and the Strong Force

The nuclear force discussed in Chapter 44 was historically called the strong force. Once the quark theory (Section 46.8) was established, however, the phrase *strong force* was reserved for the force between quarks. We shall follow this convention: the strong force is between quarks or particles built from quarks, and the nuclear force is between nucleons in a nucleus. The nuclear force is a secondary result of the strong force as discussed in Section 46.9. It is sometimes called the *residual strong force*. Because of this historical development of the names for these forces, other books sometimes refer to the nuclear force as the strong force.

In this section, we discussed the field particles that were originally proposed to mediate the nuclear force (pions) and those that mediate the electromagnetic force (photons). The graviton, the field particle for the gravitational force, has yet to be observed. In 1983, W^\pm and Z^0 particles, which mediate the weak force, were discovered by Italian physicist Carlo Rubbia (b. 1934) and his associates, using a proton–antiproton collider. Rubbia and Simon van der Meer (1925–2011), both at CERN,⁴ shared the 1984 Nobel Prize in Physics for the discovery of the W^\pm and Z^0 particles and the development of the proton–antiproton collider. Figure 46.5b shows a Feynman diagram for a weak interaction mediated by a Z^0 boson.

46.4 Classification of Particles

All particles other than field particles can be classified into two broad categories, *hadrons* and *leptons*. The criterion for separating these particles into categories is whether or not they interact via the strong force. The nuclear force between nucleons in a nucleus is a particular manifestation of the strong force, but we will use the term *strong force* to refer to any interaction between particles made up of quarks. (For more detail on quarks and the strong force, see Section 46.8.) Table 46.2 provides a summary of the properties of hadrons and leptons.

Table 46.2 Some Particles and Their Properties

Category	Particle Name	Symbol	Anti-particle	Mass (MeV/c ²)	B	L _e	L _μ	L _τ	S	Lifetime(s)	Spin	
Leptons	Electron	e [−]	e ⁺	0.511	0	+1	0	0	0	Stable	1/2	
	Electron–neutrino	ν _e	$\bar{\nu}_e$	< 2 eV/c ²	0	+1	0	0	0	Stable	1/2	
	Muon	μ [−]	μ ⁺	105.7	0	0	+1	0	0	2.20 × 10 ^{−6}	1/2	
	Muon–neutrino	ν _μ	$\bar{\nu}_\mu$	< 0.17	0	0	+1	0	0	Stable	1/2	
	Tau	τ [−]	τ ⁺	1 784	0	0	0	+1	0	< 4 × 10 ^{−13}	1/2	
	Tau–neutrino	ν _τ	$\bar{\nu}_\tau$	< 18	0	0	0	+1	0	Stable	1/2	
Hadrons	Mesons	Pion	π ⁺	π [−]	139.6	0	0	0	0	2.60 × 10 ^{−8}	0	
			π ⁰	Self	135.0	0	0	0	0	0.83 × 10 ^{−16}	0	
		Kaon	K ⁺	K [−]	493.7	0	0	0	0	+1	1.24 × 10 ^{−8}	0
			K _S ⁰	\bar{K}_S^0	497.7	0	0	0	0	+1	0.89 × 10 ^{−10}	0
			K _L ⁰	\bar{K}_L^0	497.7	0	0	0	0	+1	5.2 × 10 ^{−8}	0
		Eta	η	Self	548.8	0	0	0	0	0	< 10 ^{−18}	0
			η′	Self	958	0	0	0	0	0	2.2 × 10 ^{−21}	0
	Baryons	Proton	p	\bar{p}	938.3	+1	0	0	0	0	Stable	1/2
		Neutron	n	\bar{n}	939.6	+1	0	0	0	0	614	1/2
		Lambda	Λ ⁰	$\bar{\Lambda}^0$	1 115.6	+1	0	0	0	−1	2.6 × 10 ^{−10}	1/2
Sigma			Σ ⁺	$\bar{\Sigma}^-$	1 189.4	+1	0	0	0	−1	0.80 × 10 ^{−10}	1/2
			Σ ⁰	$\bar{\Sigma}^0$	1 192.5	+1	0	0	0	−1	6 × 10 ^{−20}	1/2
			Σ [−]	$\bar{\Sigma}^+$	1 197.3	+1	0	0	0	−1	1.5 × 10 ^{−10}	1/2
Delta			Δ ⁺⁺	$\bar{\Delta}^{--}$	1 230	+1	0	0	0	0	6 × 10 ^{−24}	3/2
			Δ ⁺	$\bar{\Delta}^-$	1 231	+1	0	0	0	0	6 × 10 ^{−24}	3/2
			Δ ⁰	$\bar{\Delta}^0$	1 232	+1	0	0	0	0	6 × 10 ^{−24}	3/2
			Δ [−]	$\bar{\Delta}^+$	1 234	+1	0	0	0	0	6 × 10 ^{−24}	3/2
Xi		Ξ ⁰	$\bar{\Xi}^0$	1 315	+1	0	0	0	−2	2.9 × 10 ^{−10}	1/2	
		Ξ [−]	$\bar{\Xi}^+$	1 321	+1	0	0	0	−2	1.64 × 10 ^{−10}	1/2	
Omega	Ω [−]	Ω ⁺	1 672	+1	0	0	0	−3	0.82 × 10 ^{−10}	1/2		

⁴CERN was originally the Conseil Européen pour la Recherche Nucléaire; the name has been altered to the European Organization for Nuclear Research, and the laboratory operated by CERN is called the European Laboratory for Particle Physics. The CERN acronym has been retained and is commonly used to refer to both the organization and the laboratory.

Hadrons

Particles that interact through the strong force (as well as through the other fundamental forces) are called **hadrons**. The two classes of hadrons, *mesons* and *baryons*, are distinguished by their masses and spins.

Mesons all have zero or integer spin (0 or 1). As indicated in Section 46.3, the name comes from the expectation that Yukawa's proposed meson mass would lie between the masses of the electron and the proton. Several meson masses do lie in this range, although mesons having masses greater than that of the proton have been found to exist.

All mesons decay finally into electrons, positrons, neutrinos, and photons. The pions are the lightest known mesons and have masses of approximately 1.4×10^2 MeV/ c^2 , and all three pions— π^+ , π^- , and π^0 —have a spin of 0. (This spin-0 characteristic indicates that the particle discovered by Anderson in 1937, the muon, is not a meson. The muon has spin $\frac{1}{2}$ and belongs in the *lepton* classification, described below.)

Baryons, the second class of hadrons, have masses equal to or greater than the proton mass (the name *baryon* means “heavy” in Greek), and their spin is always a half-integer value ($\frac{1}{2}$, $\frac{3}{2}$, . . .). Protons and neutrons are baryons, as are many other particles. With the exception of the proton, all baryons decay in such a way that the end products include a proton. For example, the baryon called the Ξ^0 hyperon (Greek letter xi) decays to the Λ^0 baryon (Greek letter lambda) in approximately 10^{-10} s. The Λ^0 then decays to a proton and a π^- in approximately 3×10^{-10} s.

Today it is believed that hadrons are not elementary particles but instead are composed of more elementary units called quarks, per Section 46.8.

Leptons

Leptons (from the Greek *leptos*, meaning “small” or “light”) are particles that do not interact by means of the strong force. All leptons have spin $\frac{1}{2}$. Unlike hadrons, which have size and structure, leptons appear to be truly elementary, meaning that they have no structure and are point-like.

Quite unlike the case with hadrons, the number of known leptons is small. Currently, scientists believe that only six leptons exist: the electron, the muon, the tau, and a neutrino associated with each: e^- , μ^- , τ^- , ν_e , ν_μ , and ν_τ . The tau lepton, discovered in 1975, has a mass about twice that of the proton. Direct experimental evidence for the neutrino associated with the tau was announced by the Fermi National Accelerator Laboratory (Fermilab) in July 2000. Each of the six leptons has an antiparticle.

Current studies indicate that neutrinos have a small but nonzero mass. If they do have mass, they cannot travel at the speed of light. In addition, because so many neutrinos exist, their combined mass may be sufficient to cause all the matter in the Universe to eventually collapse into a single point, which might then explode and create a completely new Universe! We shall discuss this possibility in more detail in Section 46.11.

46.5 Conservation Laws

The laws of conservation of energy, linear momentum, angular momentum, and electric charge for an isolated system provide us with a set of rules that all processes must follow. In Chapter 44, we learned that conservation laws are important for understanding why certain radioactive decays and nuclear reactions occur and others do not. In the study of elementary particles, a number of additional conservation laws are important. Although the two described here have no theoretical foundation, they are supported by abundant empirical evidence.

Baryon Number

Experimental results show that whenever a baryon is created in a decay or nuclear reaction, an antibaryon is also created. This scheme can be quantified by assigning every particle a quantum number, the **baryon number**, as follows: $B = +1$ for all baryons, $B = -1$ for all antibaryons, and $B = 0$ for all other particles. (See Table 46.2.) The **law of conservation of baryon number** states that

Conservation of baryon number ►

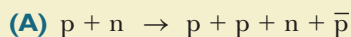
whenever a nuclear reaction or decay occurs, the sum of the baryon numbers before the process must equal the sum of the baryon numbers after the process.

If baryon number is conserved, the proton must be absolutely stable. For example, a decay of the proton to a positron and a neutral pion would satisfy conservation of energy, momentum, and electric charge. Such a decay has never been observed, however. The law of conservation of baryon number would be consistent with the absence of this decay because the proposed decay would involve the loss of a baryon. Based on experimental observations as pointed out in Example 46.2, all we can say at present is that protons have a half-life of at least 10^{33} years (the estimated age of the Universe is only 10^{10} years). Some recent theories, however, predict that the proton is unstable. According to this theory, baryon number is not absolutely conserved.

- Quick Quiz 46.2** Consider the decays (i) $n \rightarrow \pi^+ + \pi^- + \mu^+ + \mu^-$ and (ii) $n \rightarrow p + \pi^-$. From the following choices, which conservation laws are violated by each decay? (a) energy (b) electric charge (c) baryon number (d) angular momentum (e) no conservation laws

Example 46.1 Checking Baryon Numbers

Use the law of conservation of baryon number to determine whether each of the following reactions can occur:



SOLUTION


Conceptualize The mass on the right is larger than the mass on the left. Therefore, one might be tempted to claim that the reaction violates energy conservation. The reaction can indeed occur, however, if the initial particles have sufficient kinetic energy to allow for the increase in rest energy of the system.

Categorize We use a conservation law developed in this section, so we categorize this example as a substitution problem.

Evaluate the total baryon number for the left side of the reaction: $1 + 1 = 2$

Evaluate the total baryon number for the right side of the reaction: $1 + 1 + 1 + (-1) = 2$

Therefore, baryon number is conserved and the reaction can occur.



SOLUTION

Evaluate the total baryon number for the left side of the reaction: $1 + 1 = 2$

Evaluate the total baryon number for the right side of the reaction: $1 + 1 + (-1) = 1$

Because baryon number is not conserved, the reaction cannot occur.

Example 46.2 Detecting Proton Decay

Measurements taken at two neutrino detection facilities, the Irvine–Michigan–Brookhaven detector (Fig. 46.6) and the Super Kamiokande in Japan, indicate that the half-life of protons is at least 10^{33} yr.

(A) Estimate how long we would have to watch, on average, to see a proton in a glass of water decay.

SOLUTION

Conceptualize Imagine the number of protons in a glass of water. Although this number is huge, the probability of a single proton undergoing decay is small, so we would expect to wait for a long time interval before observing a decay.

Categorize Because a half-life is provided in the problem, we categorize this problem as one in which we can apply our statistical analysis techniques from Section 44.4.

Analyze Let's estimate that a drinking glass contains a number of moles n of water, with a mass of $m = 250$ g and a molar mass $M = 18$ g/mol.

Find the number of molecules of water in the glass:
$$N_{\text{molecules}} = nN_A = \frac{m}{M} N_A$$

Each water molecule contains one proton in each of its two hydrogen atoms plus eight protons in its oxygen atom, for a total of ten protons. Therefore, there are $N = 10N_{\text{molecules}}$ protons in the glass of water.

Find the activity of the protons from Equation 44.7:
$$(1) \quad R = \lambda N = \frac{\ln 2}{T_{1/2}} \left(10 \frac{m}{M} N_A \right) = \frac{\ln 2}{10^{33} \text{ yr}} (10) \left(\frac{250 \text{ g}}{18 \text{ g/mol}} \right) (6.02 \times 10^{23} \text{ mol}^{-1})$$

$$= 5.8 \times 10^{-8} \text{ yr}^{-1}$$

Finalize The decay constant represents the probability that *one* proton decays in one year. The probability that *any* proton in our glass of water decays in the one-year interval is given by Equation (1). Therefore, we must watch our glass of water for $1/R \approx 17$ million years! That indeed is a long time interval, as expected.

(B) The Super Kamiokande neutrino facility contains 50 000 metric tons of water. Estimate the average time interval between detected proton decays in this much water if the half-life of a proton is 10^{33} yr.

SOLUTION

Analyze The proton decay rate R in a sample of water is proportional to the number N of protons. Set up a ratio of the decay rate in the Super Kamiokande facility to that in a glass of water:

$$\frac{R_{\text{Kamiokande}}}{R_{\text{glass}}} = \frac{N_{\text{Kamiokande}}}{N_{\text{glass}}} \rightarrow R_{\text{Kamiokande}} = \frac{N_{\text{Kamiokande}}}{N_{\text{glass}}} R_{\text{glass}}$$

The number of protons is proportional to the mass of the sample, so express the decay rate in terms of mass:

$$R_{\text{Kamiokande}} = \frac{m_{\text{Kamiokande}}}{m_{\text{glass}}} R_{\text{glass}}$$

Substitute numerical values:

$$R_{\text{Kamiokande}} = \left(\frac{50\,000 \text{ metric tons}}{0.250 \text{ kg}} \right) \left(\frac{1\,000 \text{ kg}}{1 \text{ metric ton}} \right) (5.8 \times 10^{-8} \text{ yr}^{-1}) \approx 12 \text{ yr}^{-1}$$

Finalize The average time interval between decays is about one-twelfth of a year, or approximately one month. That is much shorter than the time interval in part (A) due to the tremendous amount of water in the detector facility. Despite this rosy prediction of one proton decay per month, a proton decay has never been observed. This suggests that the half-life of the proton may be larger than 10^{33} years or that proton decay simply does not occur.



JOE STANCAMPANO/National Geographic Stock

Figure 46.6 (Example 46.2) A diver swims through ultrapure water in the Irvine–Michigan–Brookhaven neutrino detector. This detector holds almost 7 000 metric tons of water and is lined with over 2 000 photomultiplier tubes, many of which are visible in the photograph.

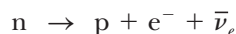
Lepton Number

There are three conservation laws involving lepton numbers, one for each variety of lepton. The **law of conservation of electron lepton number** states that

Conservation of electron lepton number

whenever a nuclear reaction or decay occurs, the sum of the electron lepton numbers before the process must equal the sum of the electron lepton numbers after the process.

The electron and the electron neutrino are assigned an electron lepton number $L_e = +1$, and the antileptons e^+ and $\bar{\nu}_e$ are assigned an electron lepton number $L_e = -1$. All other particles have $L_e = 0$. For example, consider the decay of the neutron:



Before the decay, the electron lepton number is $L_e = 0$; after the decay, it is $0 + 1 + (-1) = 0$. Therefore, electron lepton number is conserved. (Baryon number must also be conserved, of course, and it is: before the decay, $B = +1$, and after the decay, $B = +1 + 0 + 0 = +1$.)

Similarly, when a decay involves muons, the muon lepton number L_μ is conserved. The μ^- and the ν_μ are assigned a muon lepton number $L_\mu = +1$, and the antimuons μ^+ and $\bar{\nu}_\mu$ are assigned a muon lepton number $L_\mu = -1$. All other particles have $L_\mu = 0$.

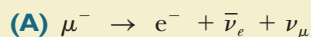
Finally, tau lepton number L_τ is conserved with similar assignments made for the tau lepton, its neutrino, and their two antiparticles.

Quick Quiz 46.3 Consider the following decay: $\pi^0 \rightarrow \mu^- + e^+ + \nu_\mu$. What conservation laws are violated by this decay? (a) energy (b) angular momentum (c) electric charge (d) baryon number (e) electron lepton number (f) muon lepton number (g) tau lepton number (h) no conservation laws

Quick Quiz 46.4 Suppose a claim is made that the decay of the neutron is given by $n \rightarrow p + e^-$. What conservation laws are violated by this decay? (a) energy (b) angular momentum (c) electric charge (d) baryon number (e) electron lepton number (f) muon lepton number (g) tau lepton number (h) no conservation laws

Example 46.3 Checking Lepton Numbers

Use the law of conservation of lepton numbers to determine whether each of the following decay schemes (A) and (B) can occur:



SOLUTION

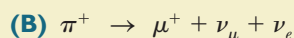
Conceptualize Because this decay involves a muon and an electron, L_μ and L_e must each be conserved separately if the decay is to occur.

Categorize We use a conservation law developed in this section, so we categorize this example as a substitution problem.

Evaluate the lepton numbers before the decay: $L_\mu = +1 \quad L_e = 0$

Evaluate the total lepton numbers after the decay: $L_\mu = 0 + 0 + 1 = +1 \quad L_e = +1 + (-1) + 0 = 0$

Therefore, both numbers are conserved and on this basis the decay is possible.



▶ 46.3 continued

SOLUTION

Evaluate the lepton numbers before the decay: $L_\mu = 0 \quad L_e = 0$


Evaluate the total lepton numbers after the decay: $L_\mu = -1 + 1 + 0 = 0 \quad L_e = 0 + 0 + 1 = 1$

Therefore, the decay is not possible because electron lepton number is not conserved.

46.6 Strange Particles and Strangeness

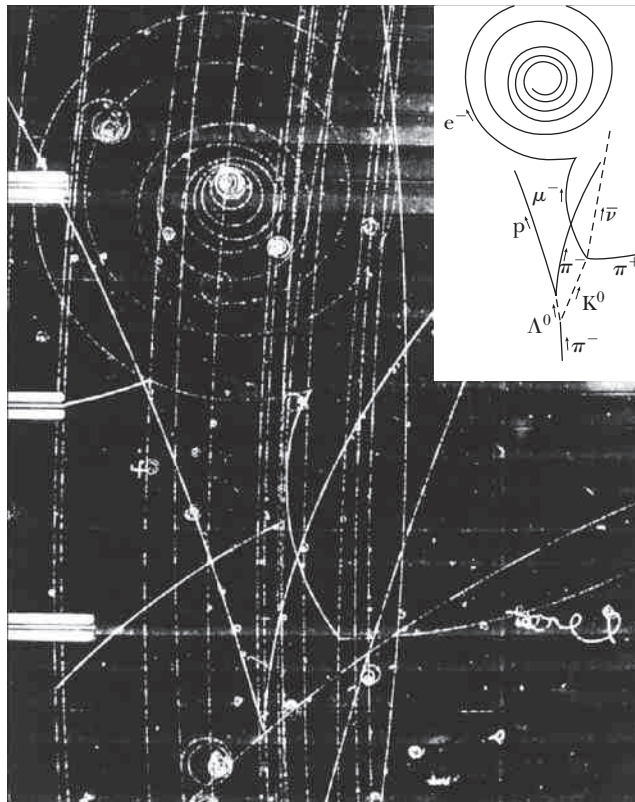
Many particles discovered in the 1950s were produced by the interaction of pions with protons and neutrons in the atmosphere. A group of these—the kaon (K), lambda (Λ), and sigma (Σ) particles—exhibited unusual properties both as they were created and as they decayed; hence, they were called *strange particles*.

One unusual property of strange particles is that they are always produced in pairs. For example, when a pion collides with a proton, a highly probable result is the production of two neutral strange particles (Fig. 46.7):



The reaction $\pi^- + p \rightarrow K^0 + n$, where only one final particle is strange, never occurs, however, even though no previously known conservation laws would be violated and even though the energy of the pion is sufficient to initiate the reaction.

The second peculiar feature of strange particles is that although they are produced in reactions involving the strong interaction at a high rate, they do not decay into particles that interact via the strong force at a high rate. Instead, they decay very slowly, which is characteristic of the weak interaction. Their half-lives are in



Courtesy Lawrence Berkeley Laboratory, University of California, Photographic Services

Figure 46.7 This bubble-chamber photograph shows many events, and the inset is a drawing of identified tracks. The strange particles Λ^0 and K^0 are formed at the bottom as a π^- particle interacts with a proton in the reaction $\pi^- + p \rightarrow K^0 + \Lambda^0$. (Notice that the neutral particles leave no tracks, as indicated by the dashed lines in the inset.) The Λ^0 then decays in the reaction $\Lambda^0 \rightarrow \pi^- + p$ and the K^0 in the reaction $K^0 \rightarrow \pi^+ + \mu^- + \bar{\nu}_\mu$.

the range 10^{-10} s to 10^{-8} s, whereas most other particles that interact via the strong force have much shorter lifetimes on the order of 10^{-23} s.

To explain these unusual properties of strange particles, a new quantum number S , called **strangeness**, was introduced, together with a conservation law. The strangeness numbers for some particles are given in Table 46.2. The production of strange particles in pairs is handled mathematically by assigning $S = +1$ to one of the particles, $S = -1$ to the other, and $S = 0$ to all nonstrange particles. The **law of conservation of strangeness** states that

Conservation of strangeness ▶

in a nuclear reaction or decay that occurs via the strong force, strangeness is conserved; that is, the sum of the strangeness numbers before the process must equal the sum of the strangeness numbers after the process. In processes that occur via the weak interaction, strangeness may not be conserved.

The low decay rate of strange particles can be explained by assuming the strong and electromagnetic interactions obey the law of conservation of strangeness but the weak interaction does not. Because the decay of a strange particle involves the loss of one strange particle, it violates strangeness conservation and hence proceeds slowly via the weak interaction.

Example 46.4 Is Strangeness Conserved?

(A) Use the law of strangeness conservation to determine whether the reaction $\pi^0 + n \rightarrow K^+ + \Sigma^-$ occurs.

SOLUTION

Conceptualize We recognize that there are strange particles appearing in this reaction, so we see that we will need to investigate conservation of strangeness.

Categorize We use a conservation law developed in this section, so we categorize this example as a substitution problem.

Evaluate the strangeness for the left side of the reaction using Table 46.2:

$$S = 0 + 0 = 0$$

Evaluate the strangeness for the right side of the reaction:

$$S = +1 - 1 = 0$$

Therefore, strangeness is conserved and the reaction is allowed.

(B) Show that the reaction $\pi^- + p \rightarrow \pi^- + \Sigma^+$ does not conserve strangeness.

SOLUTION

Evaluate the strangeness for the left side of the reaction:

$$S = 0 + 0 = 0$$

Evaluate the strangeness for the right side of the reaction:

$$S = 0 + (-1) = -1$$

Therefore, strangeness is not conserved.

46.7 Finding Patterns in the Particles

One tool scientists use is the detection of patterns in data, patterns that contribute to our understanding of nature. For example, Table 21.2 shows a pattern of molar specific heats of gases that allows us to understand the differences among monatomic, diatomic, and polyatomic gases. Figure 42.20 shows a pattern of peaks in the ionization energy of atoms that relate to the quantized energy levels in the

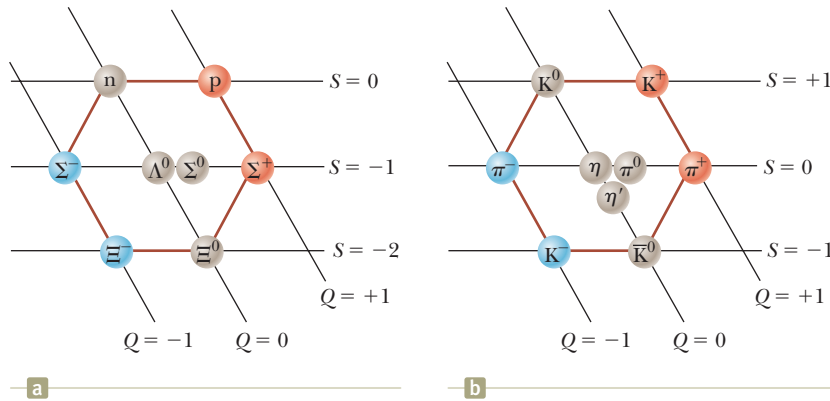


Figure 46.8 (a) The hexagonal eightfold-way pattern for the eight spin- $\frac{1}{2}$ baryons. This strangeness-versus-charge plot uses a sloping axis for charge number Q and a horizontal axis for strangeness S . (b) The eightfold-way pattern for the nine spin-zero mesons.

atoms. Figure 44.7 shows a pattern of peaks in the binding energy that suggest a shell structure within the nucleus. One of the best examples of this tool’s use is the development of the periodic table, which provides a fundamental understanding of the chemical behavior of the elements. As mentioned in the introduction, the periodic table explains how more than 100 elements can be formed from three particles, the electron, the proton, and the neutron. The table of nuclides, part of which is shown in Table 44.2, contains hundreds of nuclides, but all can be built from protons and neutrons.

The number of particles observed by particle physicists is in the hundreds. Is it possible that a small number of entities exist from which all these particles can be built? Taking a hint from the success of the periodic table and the table of nuclides, let explore the historical search for patterns among the particles.

Many classification schemes have been proposed for grouping particles into families. Consider, for instance, the baryons listed in Table 46.2 that have spins of $\frac{1}{2}$: p, n, Λ^0 , Σ^+ , Σ^0 , Σ^- , Ξ^0 , and Ξ^- . If we plot strangeness versus charge for these baryons using a sloping coordinate system as in Figure 46.8a, a fascinating pattern is observed: six of the baryons form a hexagon, and the remaining two are at the hexagon’s center.

As a second example, consider the following nine spin-zero mesons listed in Table 46.2: π^+ , π^0 , π^- , K^+ , K^0 , K^- , η , η' , and the antiparticle \bar{K}^0 . Figure 46.8b is a plot of strangeness versus charge for this family. Again, a hexagonal pattern emerges. In this case, each particle on the perimeter of the hexagon lies opposite its antiparticle and the remaining three (which form their own antiparticles) are at the center of the hexagon. These and related symmetric patterns were developed independently in 1961 by Murray Gell-Mann and Yuval Ne’eman (1925–2006). Gell-Mann called the patterns the **eightfold way**, after the eightfold path to nirvana in Buddhism.

Groups of baryons and mesons can be displayed in many other symmetric patterns within the framework of the eightfold way. For example, the family of spin- $\frac{3}{2}$ baryons known in 1961 contains nine particles arranged in a pattern like that of the pins in a bowling alley as in Figure 46.9. (The particles Σ^{*+} , Σ^{*0} , Σ^{*-} , Ξ^{*0} ,



Murray Gell-Mann
American Physicist (b. 1929)
 In 1969, Murray Gell-Mann was awarded the Nobel Prize in Physics for his theoretical studies dealing with subatomic particles.

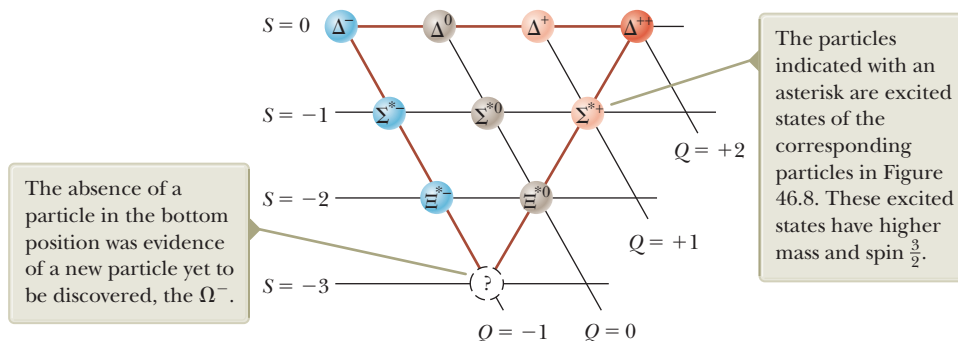
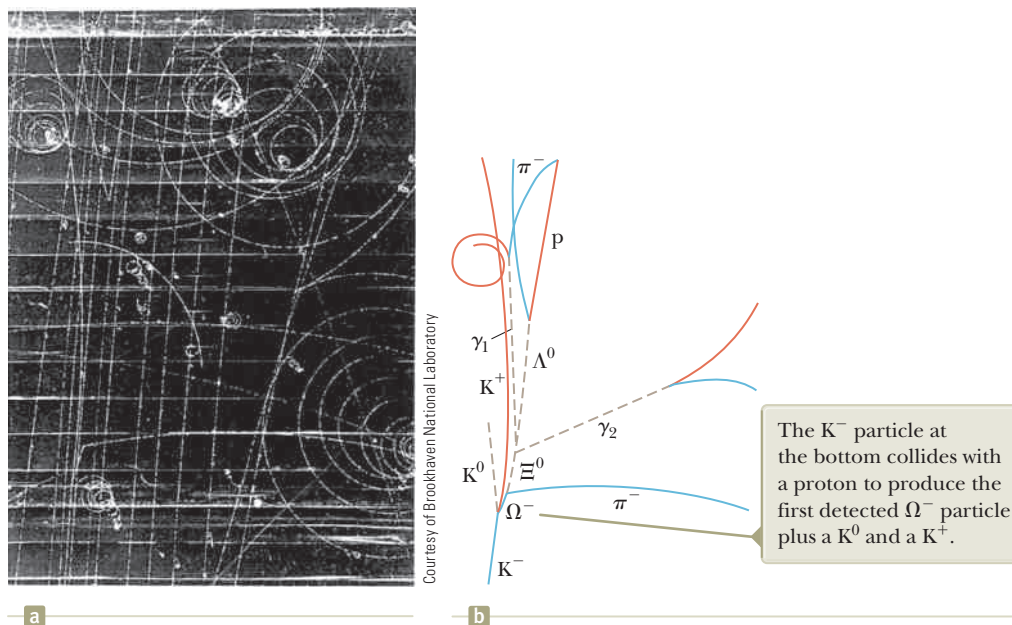


Figure 46.9 The pattern for the higher-mass, spin- $\frac{3}{2}$ baryons known at the time the pattern was proposed.

Figure 46.10 Discovery of the Ω^- particle. The photograph on the left shows the original bubble-chamber tracks. The drawing on the right isolates the tracks of the important events.



and Ξ^{*-} are excited states of the particles Σ^+ , Σ^0 , Σ^- , Ξ^0 , and Ξ^- . In these higher-energy states, the spins of the three quarks—see Section 46.8—making up the particle are aligned so that the total spin of the particle is $\frac{3}{2}$.) When this pattern was proposed, an empty spot occurred in it (at the bottom position), corresponding to a particle that had never been observed. Gell-Mann predicted that the missing particle, which he called the omega minus (Ω^-), should have spin $\frac{3}{2}$, charge -1 , strangeness -3 , and rest energy of approximately 1 680 MeV. Shortly thereafter, in 1964, scientists at the Brookhaven National Laboratory found the missing particle through careful analyses of bubble-chamber photographs (Fig. 46.10) and confirmed all its predicted properties.

The prediction of the missing particle in the eightfold way has much in common with the prediction of missing elements in the periodic table. Whenever a vacancy occurs in an organized pattern of information, experimentalists have a guide for their investigations.

46.8 Quarks

As mentioned earlier, leptons appear to be truly elementary particles because there are only a few types of them, and experiments indicate that they have no measurable size or internal structure. Hadrons, on the other hand, are complex particles having size and structure. The existence of the strangeness–charge patterns of the eightfold way suggests that hadrons have substructure. Furthermore, hundreds of types of hadrons exist and many decay into other hadrons.

The Original Quark Model

In 1963, Gell-Mann and George Zweig (b. 1937) independently proposed a model for the substructure of hadrons. According to their model, all hadrons are composed of two or three elementary constituents called **quarks**. (Gell-Mann borrowed the word *quark* from the passage “Three quarks for Muster Mark” in James Joyce’s *Finnegans Wake*. In Zweig’s model, he called the constituents “aces.”) The model has three types of quarks, designated by the symbols u , d , and s , that are given the arbitrary names **up**, **down**, and **strange**. The various types of quarks are called **flavors**. Figure 46.11 is a pictorial representation of the quark compositions of several hadrons.

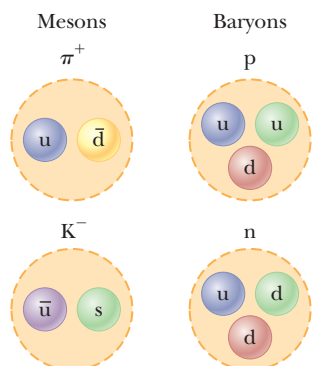


Figure 46.11 Quark composition of two mesons and two baryons.

Table 46.3 Properties of Quarks and Antiquarks

Quarks								
Name	Symbol	Spin	Charge	Baryon Number	Strangeness	Charm	Bottomness	Topness
Up	u	$\frac{1}{2}$	$+\frac{2}{3}e$	$\frac{1}{3}$	0	0	0	0
Down	d	$\frac{1}{2}$	$-\frac{1}{3}e$	$\frac{1}{3}$	0	0	0	0
Strange	s	$\frac{1}{2}$	$-\frac{1}{3}e$	$\frac{1}{3}$	-1	0	0	0
Charmed	c	$\frac{1}{2}$	$+\frac{2}{3}e$	$\frac{1}{3}$	0	+1	0	0
Bottom	b	$\frac{1}{2}$	$-\frac{1}{3}e$	$\frac{1}{3}$	0	0	+1	0
Top	t	$\frac{1}{2}$	$+\frac{2}{3}e$	$\frac{1}{3}$	0	0	0	+1
Antiquarks								
Name	Symbol	Spin	Charge	Baryon Number	Strangeness	Charm	Bottomness	Topness
Anti-up	\bar{u}	$\frac{1}{2}$	$-\frac{2}{3}e$	$-\frac{1}{3}$	0	0	0	0
Anti-down	\bar{d}	$\frac{1}{2}$	$+\frac{1}{3}e$	$-\frac{1}{3}$	0	0	0	0
Anti-strange	\bar{s}	$\frac{1}{2}$	$+\frac{1}{3}e$	$-\frac{1}{3}$	+1	0	0	0
Anti-charmed	\bar{c}	$\frac{1}{2}$	$-\frac{2}{3}e$	$-\frac{1}{3}$	0	-1	0	0
Anti-bottom	\bar{b}	$\frac{1}{2}$	$+\frac{1}{3}e$	$-\frac{1}{3}$	0	0	-1	0
Anti-top	\bar{t}	$\frac{1}{2}$	$-\frac{2}{3}e$	$-\frac{1}{3}$	0	0	0	-1

An unusual property of quarks is that they carry a fractional electric charge. The u, d, and s quarks have charges of $+2e/3$, $-e/3$, and $-e/3$, respectively, where e is the elementary charge 1.60×10^{-19} C. These and other properties of quarks and antiquarks are given in Table 46.3. Quarks have spin $\frac{1}{2}$, which means that all quarks are fermions, defined as any particle having half-integral spin, as pointed out in Section 43.8. As Table 46.3 shows, associated with each quark is an antiquark of opposite charge, baryon number, and strangeness.

The compositions of all hadrons known when Gell-Mann and Zweig presented their model can be completely specified by three simple rules:

- A meson consists of one quark and one antiquark, giving it a baryon number of 0, as required.
- A baryon consists of three quarks.
- An antibaryon consists of three antiquarks.

The theory put forth by Gell-Mann and Zweig is referred to as the *original quark model*.

- Quick Quiz 46.5** Using a coordinate system like that in Figure 46.8, draw an
- eightfold-way diagram for the three quarks in the original quark model.

Charm and Other Developments

Although the original quark model was highly successful in classifying particles into families, some discrepancies occurred between its predictions and certain experimental decay rates. Consequently, several physicists proposed a fourth quark flavor in 1967. They argued that if four types of leptons exist (as was thought at the time), there should also be four flavors of quarks because of an underlying symmetry in nature. The fourth quark, designated c, was assigned a property called **charm**. A *charmed* quark has charge $+2e/3$, just as the up quark does, but its charm distinguishes it from the other three quarks. This introduces a new quantum number C , representing charm. The new quark has charm $C = +1$, its antiquark has charm of $C = -1$, and all other quarks have $C = 0$. Charm, like strangeness, is conserved in strong and electromagnetic interactions but not in weak interactions.

Table 46.4 Quark Composition of Mesons

	Antiquarks										
	\bar{b}		\bar{c}		\bar{s}		\bar{d}		\bar{u}		
Quarks	b	Y	$(\bar{b}b)$	B_c^-	$(\bar{c}b)$	\bar{B}_s^0	$(\bar{s}b)$	\bar{B}_d^0	$(\bar{d}b)$	B^-	$(\bar{u}b)$
	c	B_c^+	$(\bar{b}c)$	J/Ψ	$(\bar{c}c)$	D_s^+	$(\bar{s}c)$	D^+	$(\bar{d}c)$	D^0	$(\bar{u}c)$
	s	B_s^0	$(\bar{b}s)$	D_s^-	$(\bar{c}s)$	η, η'	$(\bar{s}s)$	\bar{K}^0	$(\bar{d}s)$	K^-	$(\bar{u}s)$
	d	B_d^0	$(\bar{b}d)$	D^-	$(\bar{c}d)$	K^0	$(\bar{s}d)$	π^0, η, η'	$(\bar{d}d)$	π^-	$(\bar{u}d)$
	u	B^+	$(\bar{b}u)$	\bar{D}^0	$(\bar{c}u)$	K^+	$(\bar{s}u)$	π^+	$(\bar{d}u)$	π^0, η, η'	$(\bar{u}u)$

Note: The top quark does not form mesons because it decays too quickly.

Evidence that the charmed quark exists began to accumulate in 1974, when a heavy meson called the J/Ψ particle (or simply Ψ , Greek letter psi) was discovered independently by two groups, one led by Burton Richter (b. 1931) at the Stanford Linear Accelerator (SLAC), and the other led by Samuel Ting (b. 1936) at the Brookhaven National Laboratory. In 1976, Richter and Ting were awarded the Nobel Prize in Physics for this work. The J/Ψ particle does not fit into the three-quark model; instead, it has properties of a combination of the proposed charmed quark and its antiquark ($\bar{c}c$). It is much more massive than the other known mesons ($\sim 3.100 \text{ MeV}/c^2$), and its lifetime is much longer than the lifetimes of particles that interact via the strong force. Soon, related mesons were discovered, corresponding to such quark combinations as $\bar{c}d$ and $c\bar{d}$, all of which have great masses and long lifetimes. The existence of these new mesons provided firm evidence for the fourth quark flavor.

In 1975, researchers at Stanford University reported strong evidence for the tau (τ) lepton, mass $1.784 \text{ MeV}/c^2$. This fifth type of lepton led physicists to propose that more flavors of quarks might exist, on the basis of symmetry arguments similar to those leading to the proposal of the charmed quark. These proposals led to more elaborate quark models and the prediction of two new quarks, **top** (t) and **bottom** (b). (Some physicists prefer *truth* and *beauty*.) To distinguish these quarks from the others, quantum numbers called *topness* and *bottomness* (with allowed values +1, 0, -1) were assigned to all quarks and antiquarks (see Table 46.3). In 1977, researchers at the Fermi National Laboratory, under the direction of Leon Lederman (b. 1922), reported the discovery of a very massive new meson Y (Greek letter upsilon), whose composition is considered to be $b\bar{b}$, providing evidence for the bottom quark. In March 1995, researchers at Fermilab announced the discovery of the top quark (supposedly the last of the quarks to be found), which has a mass of $173 \text{ GeV}/c^2$.

Table 46.4 lists the quark compositions of mesons formed from the up, down, strange, charmed, and bottom quarks. Table 46.5 shows the quark combinations for the baryons listed in Table 46.2. Notice that only two flavors of quarks, u and d, are contained in all hadrons encountered in ordinary matter (protons and neutrons).

Will the discoveries of elementary particles ever end? How many “building blocks” of matter actually exist? At present, physicists believe that the elementary particles in nature are six quarks and six leptons, together with their antiparticles, and the four field particles listed in Table 46.1. Table 46.6 lists the rest energies and charges of the quarks and leptons.

Despite extensive experimental effort, no isolated quark has ever been observed. Physicists now believe that at ordinary temperatures, quarks are permanently confined inside ordinary particles because of an exceptionally strong force that prevents them from escaping, called (appropriately) the **strong force**⁵ (which we

Table 46.5 Quark Composition of Several Baryons

Particle	Quark Composition
p	uud
n	udd
Λ^0	uds
Σ^+	uus
Σ^0	uds
Σ^-	dds
Δ^{++}	uuu
Δ^+	uud
Δ^0	udd
Δ^-	ddd
Ξ^0	uss
Ξ^-	dss
Ω^-	sss

Note: Some baryons have the same quark composition, such as the p and the Δ^+ and the n and the Δ^0 . In these cases, the Δ particles are considered to be excited states of the proton and neutron.

⁵As a reminder, the original meaning of the term *strong force* was the short-range attractive force between nucleons, which we have called the *nuclear force*. The nuclear force between nucleons is a secondary effect of the strong force between quarks.

Table 46.6 The Elementary Particles and Their Rest Energies and Charges

Particle	Approximate Rest Energy	Charge
Quarks		
u	2.4 MeV	$+\frac{2}{3}e$
d	4.8 MeV	$-\frac{1}{3}e$
s	104 MeV	$-\frac{1}{3}e$
c	1.27 GeV	$+\frac{2}{3}e$
b	4.2 GeV	$-\frac{1}{3}e$
t	173 GeV	$+\frac{2}{3}e$
Leptons		
e^-	511 keV	$-e$
μ^-	105.7 MeV	$-e$
τ^-	1.78 GeV	$-e$
ν_e	< 2 eV	0
ν_μ	< 0.17 MeV	0
ν_τ	< 18 MeV	0

introduced at the beginning of Section 46.4 and will discuss further in Section 46.10). This force increases with separation distance, similar to the force exerted by a stretched spring. Current efforts are under way to form a **quark–gluon plasma**, a state of matter in which the quarks are freed from neutrons and protons. In 2000, scientists at CERN announced evidence for a quark–gluon plasma formed by colliding lead nuclei. In 2005, experiments at the Relativistic Heavy Ion Collider (RHIC) at Brookhaven suggested the creation of a quark–gluon plasma. Neither laboratory has provided definitive data to verify the existence of a quark–gluon plasma. Experiments continue, and the ALICE project (A Large Ion Collider Experiment) at the Large Hadron Collider at CERN has joined the search.

- Quick Quiz 46.6** Doubly charged baryons, such as the Δ^{++} , are known to exist.
- True or False: Doubly charged mesons also exist.

46.9 Multicolored Quarks

Shortly after the concept of quarks was proposed, scientists recognized that certain particles had quark compositions that violated the exclusion principle. In Section 42.7, we applied the exclusion principle to electrons in atoms. The principle is more general, however, and applies to all particles with half-integral spin ($\frac{1}{2}$, $\frac{3}{2}$, etc.), which are collectively called fermions. Because all quarks are fermions having spin $\frac{1}{2}$, they are expected to follow the exclusion principle. One example of a particle that appears to violate the exclusion principle is the Ω^- (sss) baryon, which contains three strange quarks having parallel spins, giving it a total spin of $\frac{3}{2}$. All three quarks have the same spin quantum number, in violation of the exclusion principle. Other examples of baryons made up of identical quarks having parallel spins are the Δ^{++} (uuu) and the Δ^- (ddd).

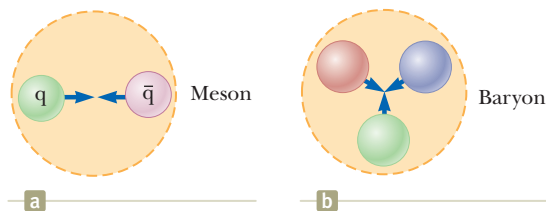
To resolve this problem, it was suggested that quarks possess an additional property called **color charge**. This property is similar in many respects to electric charge except that it occurs in six varieties rather than two. The colors assigned to quarks are red, green, and blue, and antiquarks have the colors antired, antigreen, and antiblue. Therefore, the colors red, green, and blue serve as the “quantum numbers” for the color of the quark. To satisfy the exclusion principle, the three quarks in any baryon must all have different colors. Look again at the quarks in the baryons in Figure 46.11 and notice the colors. The three colors “neutralize” to white.

Pitfall Prevention 46.3

Color Charge Is Not Really Color

The description of color for a quark has nothing to do with visual sensation from light. It is simply a convenient name for a property that is analogous to electric charge.

Figure 46.12 (a) A green quark is attracted to an antigreen quark. This forms a meson whose quark structure is $(q\bar{q})$. (b) Three quarks of different colors attract one another to form a baryon.



A quark and an antiquark in a meson must be of a color and the corresponding anticolor and will consequently neutralize to white, similar to the way electric charges $+$ and $-$ neutralize to zero net charge. (See the mesons in Fig. 46.11.) The apparent violation of the exclusion principle in the Ω^- baryon is removed because the three quarks in the particle have different colors.

The new property of color increases the number of quarks by a factor of 3 because each of the six quarks comes in three colors. Although the concept of color in the quark model was originally conceived to satisfy the exclusion principle, it also provided a better theory for explaining certain experimental results. For example, the modified theory correctly predicts the lifetime of the π^0 meson.

The theory of how quarks interact with each other is called **quantum chromodynamics**, or QCD, to parallel the name *quantum electrodynamics* (the theory of the electrical interaction between light and matter). In QCD, each quark is said to carry a color charge, in analogy to electric charge. The strong force between quarks is often called the **color force**. Therefore, the terms *strong force* and *color force* are used interchangeably.

In Section 46.1, we stated that the nuclear interaction between hadrons is mediated by massless field particles called **gluons**. As mentioned earlier, the nuclear force is actually a secondary effect of the strong force between quarks. The gluons are the mediators of the strong force. When a quark emits or absorbs a gluon, the quark's color may change. For example, a blue quark that emits a gluon may become a red quark and a red quark that absorbs this gluon becomes a blue quark.

The color force between quarks is analogous to the electric force between charges: particles with the same color repel, and those with opposite colors attract. Therefore, two green quarks repel each other, but a green quark is attracted to an antigreen quark. The attraction between quarks of opposite color to form a meson ($q\bar{q}$) is indicated in Figure 46.12a. Differently colored quarks also attract one another, although with less intensity than the oppositely colored quark and antiquark. For example, a cluster of red, blue, and green quarks all attract one another to form a baryon as in Figure 46.12b. Therefore, every baryon contains three quarks of three different colors.

Although the nuclear force between two colorless hadrons is negligible at large separations, the net strong force between their constituent quarks is not exactly zero at small separations. This residual strong force is the nuclear force that binds protons and neutrons to form nuclei. It is similar to the force between two electric dipoles. Each dipole is electrically neutral. An electric field surrounds the dipoles, however, because of the separation of the positive and negative charges (see Section 23.6). As a result, an electric interaction occurs between the dipoles that is weaker than the force between single charges. In Section 43.1, we explored how this interaction results in the Van der Waals force between neutral molecules.

According to QCD, a more basic explanation of the nuclear force can be given in terms of quarks and gluons. Figure 46.13a shows the nuclear interaction between a neutron and a proton by means of Yukawa's pion, in this case a π^- . This drawing differs from Figure 46.5a, in which the field particle is a π^0 ; there is no transfer of charge from one nucleon to the other in Figure 46.5a. In Figure 46.13a, the charged pion carries charge from one nucleon to the other, so the nucleons change identities, with the proton becoming a neutron and the neutron becoming a proton.

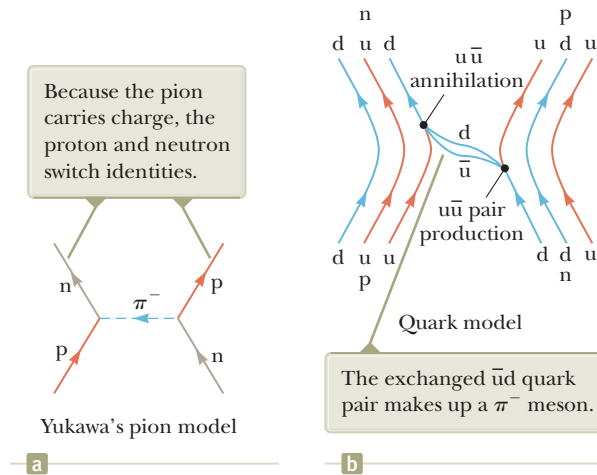


Figure 46.13 (a) A nuclear interaction between a proton and a neutron explained in terms of Yukawa's pion-exchange model. (b) The same interaction, explained in terms of quarks and gluons.

Let's look at the same interaction from the viewpoint of the quark model, shown in Figure 46.13b. In this Feynman diagram, the proton and neutron are represented by their quark constituents. Each quark in the neutron and proton is continuously emitting and absorbing gluons. The energy of a gluon can result in the creation of quark–antiquark pairs. This process is similar to the creation of electron–positron pairs in pair production, which we investigated in Section 46.2. When the neutron and proton approach to within 1 fm of each other, these gluons and quarks can be exchanged between the two nucleons, and such exchanges produce the nuclear force. Figure 46.13b depicts one possibility for the process shown in Figure 46.13a. A down quark in the neutron on the right emits a gluon. The energy of the gluon is then transformed to create a $u\bar{u}$ pair. The u quark stays within the nucleon (which has now changed to a proton), and the recoiling d quark and the \bar{u} antiquark are transmitted to the proton on the left side of the diagram. Here the \bar{u} annihilates a u quark within the proton and the d is captured. The net effect is to change a u quark to a d quark, and the proton on the left has changed to a neutron.

As the d quark and \bar{u} antiquark in Figure 46.13b transfer between the nucleons, the d and \bar{u} exchange gluons with each other and can be considered to be bound to each other by means of the strong force. Looking back at Table 46.4, we see that this combination is a π^- , or Yukawa's field particle! Therefore, the quark model of interactions between nucleons is consistent with the pion-exchange model.

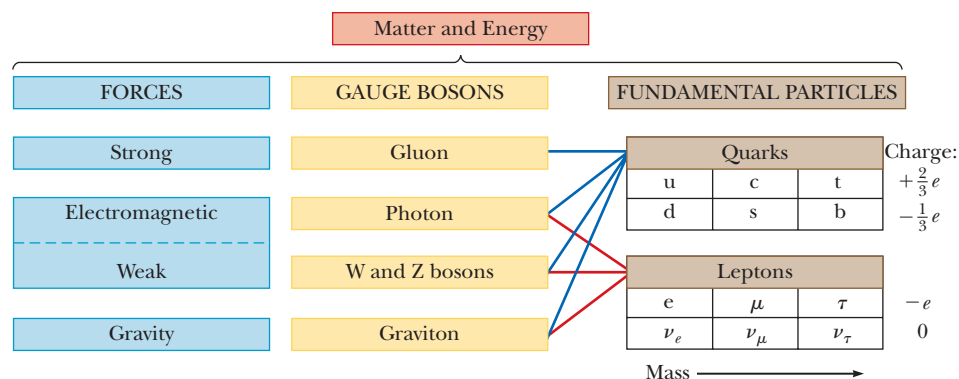
46.10 The Standard Model

Scientists now believe there are three classifications of truly elementary particles: leptons, quarks, and field particles. These three types of particles are further classified as either fermions or bosons. Quarks and leptons have spin $\frac{1}{2}$ and hence are fermions, whereas the field particles have integral spin of 1 or higher and are bosons.

Recall from Section 46.1 that the weak force is believed to be mediated by the W^+ , W^- , and Z^0 bosons. These particles are said to have *weak charge*, just as quarks have color charge. Therefore, each elementary particle can have mass, electric charge, color charge, and weak charge. Of course, one or more of these could be zero.

In 1979, Sheldon Glashow (b. 1932), Abdus Salam (1926–1996), and Steven Weinberg (b. 1933) won the Nobel Prize in Physics for developing a theory that unifies the electromagnetic and weak interactions. This **electroweak theory** postulates that the weak and electromagnetic interactions have the same strength when the particles involved have very high energies. The two interactions are viewed as different manifestations of a single unifying electroweak interaction. The theory makes many concrete predictions, but perhaps the most spectacular is the prediction of

Figure 46.14 The Standard Model of particle physics.



the masses of the W and Z particles at approximately $82 \text{ GeV}/c^2$ and $93 \text{ GeV}/c^2$, respectively. These predictions are close to the masses in Table 46.1 determined by experiment.

The combination of the electroweak theory and QCD for the strong interaction is referred to in high-energy physics as the **Standard Model**. Although the details of the Standard Model are complex, its essential ingredients can be summarized with the help of Fig. 46.14. (Although the Standard Model does not include the gravitational force at present, we include gravity in Fig. 46.14 because physicists hope to eventually incorporate this force into a unified theory.) This diagram shows that quarks participate in all the fundamental forces and that leptons participate in all except the strong force.

The Standard Model does not answer all questions. A major question still unanswered is why, of the two mediators of the electroweak interaction, the photon has no mass but the W and Z bosons do. Because of this mass difference, the electromagnetic and weak forces are quite distinct at low energies but become similar at very high energies, when the rest energy is negligible relative to the total energy. The behavior as one goes from high to low energies is called *symmetry breaking* because the forces are similar, or symmetric, at high energies but are very different at low energies. The nonzero rest energies of the W and Z bosons raise the question of the origin of particle masses. To resolve this problem, a hypothetical particle called the **Higgs boson**, which provides a mechanism for breaking the electroweak symmetry, has been proposed. The Standard Model modified to include the Higgs boson provides a logically consistent explanation of the massive nature of the W and Z bosons. In July 2012, announcements from the ATLAS (A Toroidal LHC Apparatus) and CMS (Compact Muon Solenoid) experiments at the Large Hadron Collider (LHC) at CERN claimed the discovery of a new particle having properties consistent with that of a Higgs boson. The mass of the particle is 125–127 GeV, within the range of predictions made from theoretical considerations using the Standard Model.

Because of the limited energy available in conventional accelerators using fixed targets, it is necessary to employ colliding-beam accelerators called **colliders**. The concept of colliders is straightforward. Particles that have equal masses and equal kinetic energies, traveling in opposite directions in an accelerator ring, collide head-on to produce the required reaction and form new particles. Because the total momentum of the interacting particles is zero, all their kinetic energy is available for the reaction.

Several colliders provided important data for understanding the Standard Model in the latter part of the 20th century and the first decade of the 21st century: the Large Electron–Positron (LEP) Collider and the Super Proton Synchrotron at CERN, the Stanford Linear Collider, and the Tevatron at the Fermi National Laboratory in Illinois. The Relativistic Heavy Ion Collider at Brookhaven National Laboratory is the sole remaining collider in operation in the United States. The Large Hadron Collider at CERN, which began collision operations in March 2010, has

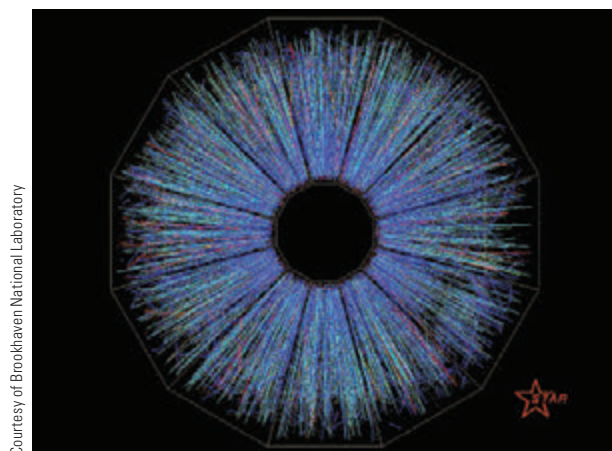


Figure 46.15 A shower of particle tracks from a head-on collision of gold nuclei, each moving with energy 100 GeV. This collision occurred at the Relativistic Heavy Ion Collider (RHIC) at Brookhaven National Laboratory and was recorded with the STAR (Solenoidal Tracker at RHIC) detector. The tracks represent many fundamental particles arising from the energy of the collision.

taken the lead in particle studies due to its extremely high energy capabilities. The expected upper limit for the LHC is a center-of-mass energy of 14 TeV. (See page 868 for a photo of a magnet used by the LHC.)

In addition to increasing energies in modern accelerators, detection techniques have become increasingly sophisticated. We saw simple bubble-chamber photographs earlier in this chapter that required hours of analysis by hand. Figure 46.15 shows a complex set of tracks from a collision of gold nuclei.

46.11 The Cosmic Connection

In this section, we describe one of the most fascinating theories in all science—the Big Bang theory of the creation of the Universe—and the experimental evidence that supports it. This theory of cosmology states that the Universe had a beginning and furthermore that the beginning was so cataclysmic that it is impossible to look back beyond it. According to this theory, the Universe erupted from an infinitely dense singularity about 14 billion years ago. The first few moments after the Big Bang saw such extremely high energy that it is believed that all four interactions of physics were unified and all matter was contained in a quark–gluon plasma.

The evolution of the four fundamental forces from the Big Bang to the present is shown in Figure 46.16 (page 1470). During the first 10^{-43} s (the ultrahot epoch, $T \sim 10^{32}$ K), it is presumed the strong, electroweak, and gravitational forces were joined to form a completely unified force. In the first 10^{-35} s following the Big Bang (the hot epoch, $T \sim 10^{29}$ K), symmetry breaking occurred for gravity while the strong and electroweak forces remained unified. It was a period when particle energies were so great ($> 10^{16}$ GeV) that very massive particles as well as quarks, leptons, and their antiparticles existed. Then, after 10^{-35} s, the Universe rapidly expanded and cooled (the warm epoch, $T \sim 10^{29}$ to 10^{15} K) and the strong and electroweak forces parted company. As the Universe continued to cool, the electroweak force split into the weak force and the electromagnetic force approximately 10^{-10} s after the Big Bang.

After a few minutes, protons and neutrons condensed out of the plasma. For half an hour, the Universe underwent thermonuclear fusion, exploding as a hydrogen bomb and producing most of the helium nuclei that now exist. The Universe continued to expand, and its temperature dropped. Until about 700 000 years after the Big Bang, the Universe was dominated by radiation. Energetic radiation prevented matter from forming single hydrogen atoms because photons would instantly ionize any atoms that happened to form. Photons experienced continuous Compton scattering from the vast numbers of free electrons, resulting in a Universe that was opaque to radiation. By the time the Universe was about 700 000 years old, it had

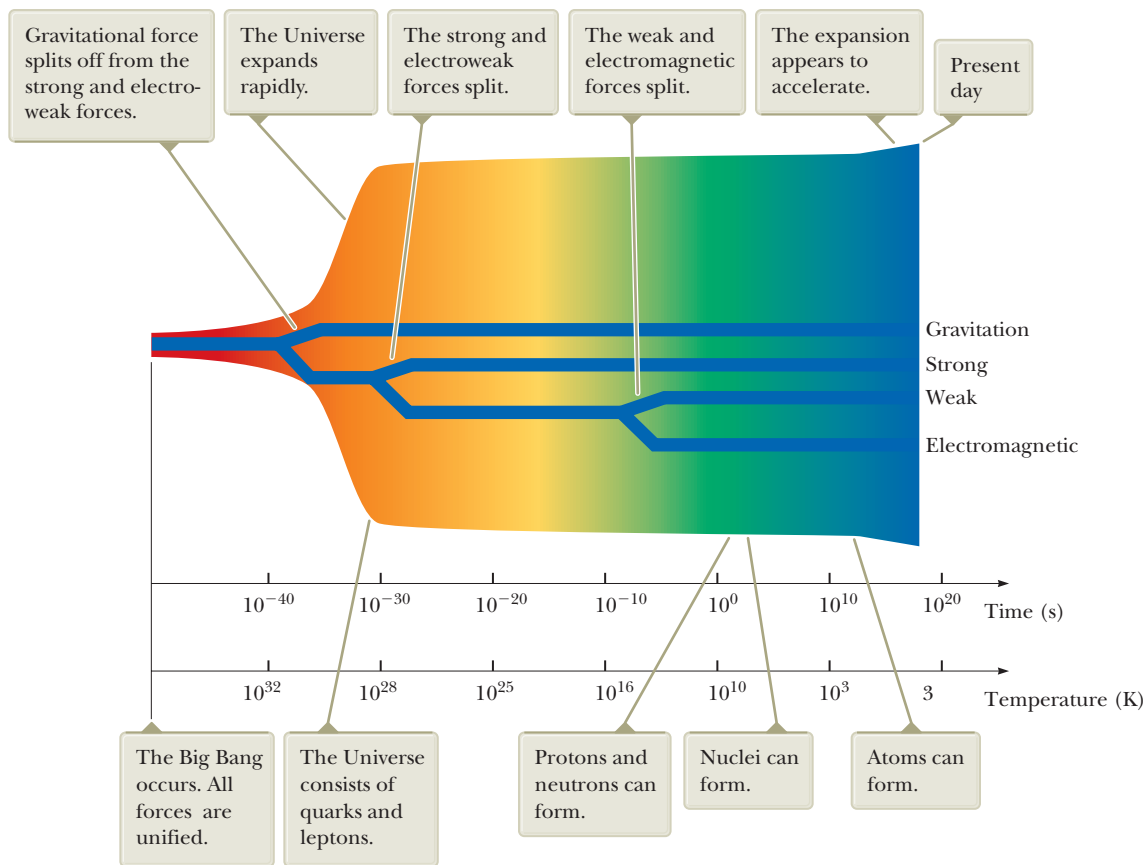


Figure 46.16 A brief history of the Universe from the Big Bang to the present. The four forces became distinguishable during the first nanosecond. Following that, all the quarks combined to form particles that interact via the nuclear force. The leptons, however, remained separate and to this day exist as individual, observable particles.

expanded and cooled to approximately 3 000 K and protons could bind to electrons to form neutral hydrogen atoms. Because of the quantized energies of the atoms, far more wavelengths of radiation were not absorbed by atoms than were absorbed, and the Universe suddenly became transparent to photons. Radiation no longer dominated the Universe, and clumps of neutral matter steadily grew: first atoms, then molecules, gas clouds, stars, and finally galaxies.

Observation of Radiation from the Primordial Fireball

In 1965, Arno A. Penzias (b. 1933) and Robert W. Wilson (b. 1936) of Bell Laboratories were testing a sensitive microwave receiver and made an amazing discovery. A pesky signal producing a faint background hiss was interfering with their satellite communications experiments. The microwave horn that served as their receiving antenna is shown in Figure 46.17. Evicting a flock of pigeons from the 20-ft horn and cooling the microwave detector both failed to remove the signal.

The intensity of the detected signal remained unchanged as the antenna was pointed in different directions. That the radiation had equal strengths in all directions suggested that the entire Universe was the source of this radiation. Ultimately, it became clear that they were detecting microwave background radiation (at a wavelength of 7.35 cm), which represented the leftover “glow” from the Big Bang. Through a casual conversation, Penzias and Wilson discovered that a group at Princeton University had predicted the residual radiation from the Big Bang and were planning an experiment to attempt to confirm the theory. The excitement in the scientific community was high when Penzias and Wilson announced that they had already observed an excess microwave background compatible with a 3-K



Figure 46.17 Robert W. Wilson (left) and Arno A. Penzias with the Bell Telephone Laboratories horn-reflector antenna.

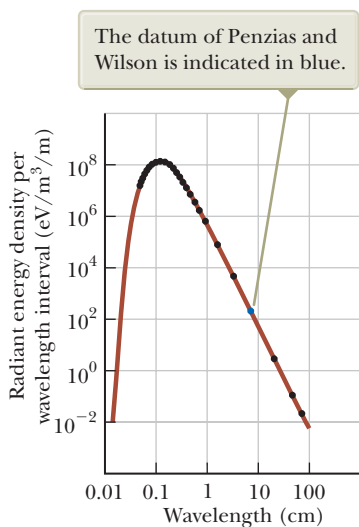


Figure 46.18 Theoretical black-body (brown curve) and measured radiation spectra (black points) of the Big Bang. Most of the data were collected from the COsmic Background Explorer, or COBE, satellite.

blackbody source, which was consistent with the predicted temperature of the Universe at this time after the Big Bang.

Because Penzias and Wilson made their measurements at a single wavelength, they did not completely confirm the radiation as 3-K blackbody radiation. Subsequent experiments by other groups added intensity data at different wavelengths as shown in Figure 46.18. The results confirm that the radiation is that of a black body at 2.7 K. This figure is perhaps the most clear-cut evidence for the Big Bang theory. The 1978 Nobel Prize in Physics was awarded to Penzias and Wilson for this most important discovery.

In the years following Penzias and Wilson's discovery, other researchers made measurements at different wavelengths. In 1989, the COBE (COsmic Background Explorer) satellite was launched by NASA and added critical measurements at wavelengths below 0.1 cm. The results of these measurements led to a Nobel Prize in Physics for the principal investigators in 2006. Several data points from COBE are shown in Figure 46.18. The Wilkinson Microwave Anisotropy Probe, launched in June 2001, exhibits data that allow observation of temperature differences in the cosmos in the microkelvin range. Ongoing observations are also being made from Earth-based facilities, associated with projects such as QUaD, Qubic, and the South Pole Telescope. In addition, the Planck satellite was launched in May 2009 by the European Space Agency. This space-based observatory has been measuring the cosmic background radiation with higher sensitivity than the Wilkinson probe. The series of measurements taken since 1965 are consistent with thermal radiation associated with a temperature of 2.7 K. The whole story of the cosmic temperature is a remarkable example of science at work: building a model, making a prediction, taking measurements, and testing the measurements against the predictions.

Other Evidence for an Expanding Universe

The Big Bang theory of cosmology predicts that the Universe is expanding. Most of the key discoveries supporting the theory of an expanding Universe were made in the 20th century. Vesto Melvin Slipher (1875–1969), an American astronomer, reported in 1912 that most galaxies are receding from the Earth at speeds up to several million miles per hour. Slipher was one of the first scientists to use Doppler shifts (see Section 17.4) in spectral lines to measure galaxy velocities.

In the late 1920s, Edwin P. Hubble (1889–1953) made the bold assertion that the whole Universe is expanding. From 1928 to 1936, until they reached the limits of the 100-inch telescope, Hubble and Milton Humason (1891–1972) worked at Mount Wilson in California to prove this assertion. The results of that work and of its continuation with the use of a 200-inch telescope in the 1940s showed that the speeds

at which galaxies are receding from the Earth increase in direct proportion to their distance R from us. This linear relationship, known as **Hubble's law**, may be written

Hubble's law ▶

$$v = HR \quad (46.4)$$

where H , called the **Hubble constant**, has the approximate value

$$H \approx 22 \times 10^{-3} \text{ m}/(\text{s} \cdot \text{ly})$$

Example 46.5 Recession of a Quasar **AM**

A quasar is an object that appears similar to a star and is very distant from the Earth. Its speed can be determined from Doppler-shift measurements in the light it emits. A certain quasar recedes from the Earth at a speed of $0.55c$. How far away is it?

SOLUTION

Conceptualize A common mental representation for the Hubble law is that of raisin bread cooking in an oven. Imagine yourself at the center of the loaf of bread. As the entire loaf of bread expands upon heating, raisins near you move slowly with respect to you. Raisins far away from you on the edge of the loaf move at a higher speed.

Categorize We use a concept developed in this section, so we categorize this example as a substitution problem.

Find the distance through Hubble's law:

$$R = \frac{v}{H} = \frac{(0.55)(3.00 \times 10^8 \text{ m/s})}{22 \times 10^{-3} \text{ m}/(\text{s} \cdot \text{ly})} = 7.5 \times 10^9 \text{ ly}$$

WHAT IF? Suppose the quasar has moved at this speed ever since the Big Bang. With this assumption, estimate the age of the Universe.

Answer Let's approximate the distance from the Earth to the quasar as the distance the quasar has moved from the singularity since the Big Bang. We can then find the time interval from the *particle under constant speed* model: $\Delta t = d/v = R/v = 1/H \approx 14$ billion years, which is in approximate agreement with other calculations.

Will the Universe Expand Forever?

In the 1950s and 1960s, Allan R. Sandage (1926–2010) used the 200-inch telescope at Mount Palomar to measure the speeds of galaxies at distances of up to 6 billion light-years away from the Earth. These measurements showed that these very distant galaxies were moving approximately 10 000 km/s faster than Hubble's law predicted. According to this result, the Universe must have been expanding more rapidly 1 billion years ago, and consequently we conclude from these data that the expansion rate is slowing.⁶ Today, astronomers and physicists are trying to determine the rate of expansion. If the average mass density of the Universe is less than some critical value ρ_c , the galaxies will slow in their outward rush but still escape to infinity. If the average density exceeds the critical value, the expansion will eventually stop and contraction will begin, possibly leading to a superdense state followed by another expansion. In this scenario, we have an oscillating Universe.

Example 46.6 The Critical Density of the Universe **AM**

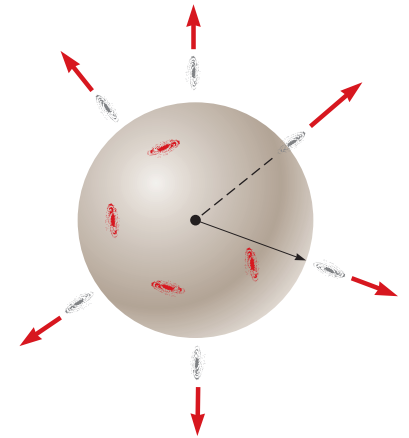
(A) Starting from energy conservation, derive an expression for the critical mass density of the Universe ρ_c in terms of the Hubble constant H and the universal gravitational constant G .

⁶The data at large distances have large observational uncertainties and may be systematically in error from effects such as abnormal brightness in the most distant visible clusters.

SOLUTION

Conceptualize Figure 46.19 shows a large section of the Universe, contained within a sphere of radius R . The total mass in this volume is M . A galaxy of mass m that has a speed v at a distance r from the center of the sphere escapes to infinity (at which its speed approaches zero) if the sum of its kinetic energy and the gravitational potential energy of the system is zero.

Figure 46.19 (Example 46.6) The galaxy marked with mass m is escaping from a large cluster of galaxies contained within a spherical volume of radius R . Only the mass within radius r slows the escaping galaxy.



Categorize The Universe may be infinite in spatial extent, but Gauss's law for gravitation (an analog to Gauss's law for electric fields in Chapter 24) implies that only the mass M inside the sphere contributes to the gravitational potential energy of the galaxy–sphere system. Therefore, we categorize this problem as one in which we apply Gauss's law for gravitation. We model the sphere in Figure 46.19 and the escaping galaxy as an *isolated system* for *energy*.

Analyze Write the appropriate reduction of Equation 8.2, assuming that the galaxy leaves the spherical volume while moving at the escape speed:

$$-mv^2 + \left[-\frac{GmM}{r} \right] = 0$$

Substitute for the mass M contained within the sphere the product of the critical density and the volume of the sphere:

$$-mv^2 + \left[-\frac{Gm}{r} \left(\rho_c \frac{4}{3}\pi r^3 \right) \right] = 0$$

Solve for the critical density:

$$\rho_c = \frac{3v^2}{8\pi G r^2}$$

From Hubble's law, substitute for the ratio v/r :

$$(1) \quad \rho_c = \frac{3H^2}{8\pi G}$$

(B) Estimate a numerical value for the critical density in grams per cubic centimeter.

SOLUTION

In Equation (1), substitute numerical values for H and G :

$$\rho_c = \frac{3}{8\pi} \frac{(22 \text{ } 10^8 \text{ m ly})^2}{6.67 \text{ } 10^{-11} \text{ N kg}^{-2} \text{ m}^2}$$

Reconcile the units by converting light-years to meters:

$$8.7 \text{ } 10^8 \text{ kg ly}^2 \frac{1 \text{ ly}}{9.46 \text{ } 10^{15} \text{ m}} = 9.7 \text{ } 10^{30} \text{ kg/m}^3$$

Finalize Because the mass of a hydrogen atom is $1.67 \text{ } 10^{-24} \text{ g}$, this value of ρ_c corresponds to 6 hydrogen atoms per cubic centimeter or 6 atoms per cubic meter.

Missing Mass in the Universe?

The luminous matter in galaxies averages out to a Universe density of about 10^{-26} g/cm^3 . The radiation in the Universe has a mass equivalent of approximately 2% of the luminous matter. The total mass of all nonluminous matter (such as interstellar gas and black holes) may be estimated from the speeds of galaxies orbiting each other in a cluster. The higher the galaxy speeds, the more mass in the cluster. Measurements on the Coma cluster of galaxies indicate, surprisingly,

that the amount of nonluminous matter is 20 to 30 times the amount of luminous matter present in stars and luminous gas clouds. Yet even this large, invisible component of *dark matter* (see Section 13.6), if extrapolated to the Universe as a whole, leaves the observed mass density a factor of 10 less than ρ_c calculated in Example 46.6. The deficit, called *missing mass*, has been the subject of intense theoretical and experimental work, with exotic particles such as axions, photinos, and superstring particles suggested as candidates for the missing mass. Some researchers have made the more mundane proposal that the missing mass is present in neutrinos. In fact, neutrinos are so abundant that a tiny neutrino rest energy on the order of only 20 eV would furnish the missing mass and “close” the Universe. Current experiments designed to measure the rest energy of the neutrino will have an effect on predictions for the future of the Universe.

Mysterious Energy in the Universe?

A surprising twist in the story of the Universe arose in 1998 with the observation of a class of supernovae that have a fixed absolute brightness. By combining the apparent brightness and the redshift of light from these explosions, their distance and speed of recession from the Earth can be determined. These observations led to the conclusion that the expansion of the Universe is not slowing down, but is accelerating! Observations by other groups also led to the same interpretation.

To explain this acceleration, physicists have proposed *dark energy*, which is energy possessed by the vacuum of space. In the early life of the Universe, gravity dominated over the dark energy. As the Universe expanded and the gravitational force between galaxies became smaller because of the great distances between them, the dark energy became more important. The dark energy results in an effective repulsive force that causes the expansion rate to increase.⁷

Although there is some degree of certainty about the beginning of the Universe, we are uncertain about how the story will end. Will the Universe keep on expanding forever, or will it someday collapse and then expand again, perhaps in an endless series of oscillations? Results and answers to these questions remain inconclusive, and the exciting controversy continues.

46.12 Problems and Perspectives

While particle physicists have been exploring the realm of the very small, cosmologists have been exploring cosmic history back to the first microsecond of the Big Bang. Observation of the events that occur when two particles collide in an accelerator is essential for reconstructing the early moments in cosmic history. For this reason, perhaps the key to understanding the early Universe is to first understand the world of elementary particles. Cosmologists and physicists now find that they have many common goals and are joining hands in an attempt to understand the physical world at its most fundamental level.

Our understanding of physics at short distances is far from complete. Particle physics is faced with many questions. Why does so little antimatter exist in the Universe? Is it possible to unify the strong and electroweak theories in a logical and consistent manner? Why do quarks and leptons form three similar but distinct families? Are muons the same as electrons apart from their difference in mass, or do they have other subtle differences that have not been detected? Why are some particles charged and others neutral? Why do quarks carry a fractional charge? What determines the masses of the elementary constituents of matter? Can isolated quarks exist? Why do electrons and protons have *exactly* the same magnitude of

⁷For an overview of dark energy, see S. Perlmutter, “Supernovae, Dark Energy, and the Accelerating Universe,” *Physics Today* 56(4): 53–60, April 2003.

charge when one is a truly fundamental particle and the other is built from smaller particles?

An important and obvious question that remains is whether leptons and quarks have an underlying structure. If they do, we can envision an infinite number of deeper structure levels. If leptons and quarks are indeed the ultimate constituents of matter, however, scientists hope to construct a final theory of the structure of matter, just as Einstein dreamed of doing. This theory, whimsically called the Theory of Everything, is a combination of the Standard Model and a quantum theory of gravity.

String Theory: A New Perspective

Let's briefly discuss one current effort at answering some of these questions by proposing a new perspective on particles. While reading this book, you may recall starting off with the *particle* model in Chapter 2 and doing quite a bit of physics with it. In Chapter 16, we introduced the *wave* model, and there was more physics to be investigated via the properties of waves. We used a *wave* model for light in Chapter 35; in Chapter 40, however, we saw the need to return to the *particle* model for light. Furthermore, we found that material particles had wave-like characteristics. The quantum particle model discussed in Chapter 40 allowed us to build particles out of waves, suggesting that a *wave* is the fundamental entity. In the current Chapter 46, however, we introduced elementary *particles* as the fundamental entities. It seems as if we cannot make up our mind! In this final section, we discuss a current research effort to build particles out of waves and vibrations on strings!

String theory is an effort to unify the four fundamental forces by modeling all particles as various quantized vibrational modes of a single entity, an incredibly small string. The typical length of such a string is on the order of 10^{-35} m, called the **Planck length**. We have seen quantized modes before in the frequencies of vibrating guitar strings in Chapter 18 and the quantized energy levels of atoms in Chapter 42. In string theory, each quantized mode of vibration of the string corresponds to a different elementary particle in the Standard Model.

One complicating factor in string theory is that it requires space–time to have ten dimensions. Despite the theoretical and conceptual difficulties in dealing with ten dimensions, string theory holds promise in incorporating gravity with the other forces. Four of the ten dimensions—three space dimensions and one time dimension—are visible to us. The other six are said to be *compactified*; that is, the six dimensions are curled up so tightly that they are not visible in the macroscopic world.

As an analogy, consider a soda straw. You can build a soda straw by cutting a rectangular piece of paper (Fig. 46.20a), which clearly has two dimensions, and rolling it into a small tube (Fig. 46.20b). From far away, the soda straw looks like a one-dimensional straight line. The second dimension has been curled up and is not visible. String theory claims that six space–time dimensions are curled up in an analogous way, with the curling being on the size of the Planck length and impossible to see from our viewpoint.

Another complicating factor with string theory is that it is difficult for string theorists to guide experimentalists as to what to look for in an experiment. The

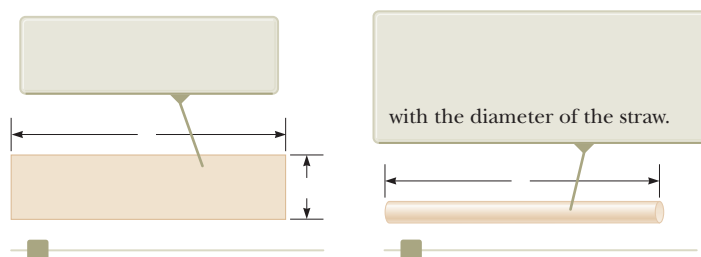


Figure 46.20 (a) A piece of paper is cut into a rectangular shape. (b) The paper is rolled up into a soda straw.

Planck length is so small that direct experimentation on strings is impossible. Until the theory has been further developed, string theorists are restricted to applying the theory to known results and testing for consistency.

One of the predictions of string theory, called **supersymmetry**, or SUSY, suggests that every elementary particle has a superpartner that has not yet been observed. It is believed that supersymmetry is a broken symmetry (like the broken electroweak symmetry at low energies) and the masses of the superpartners are above our current capabilities of detection by accelerators. Some theorists claim that the mass of superpartners is the missing mass discussed in Section 46.11. Keeping with the whimsical trend in naming particles and their properties, superpartners are given names such as the *squark* (the superpartner to a quark), the *selectron* (electron), and the *gluino* (gluon).

Other theorists are working on **M-theory**, which is an eleven-dimensional theory based on membranes rather than strings. In a way reminiscent of the correspondence principle, M-theory is claimed to reduce to string theory if one compactifies from eleven dimensions to ten dimensions.

The questions listed at the beginning of this section go on and on. Because of the rapid advances and new discoveries in the field of particle physics, many of these questions may be resolved in the next decade and other new questions may emerge.

Summary

Concepts and Principles

Before quark theory was developed, the four fundamental forces in nature were identified as nuclear, electromagnetic, weak, and gravitational. All the interactions in which these forces take part are mediated by **field particles**. The electromagnetic interaction is mediated by photons; the weak interaction is mediated by the W^\pm and Z^0 bosons; the gravitational interaction is mediated by gravitons; and the nuclear interaction is mediated by gluons.

Particles other than field particles are classified as hadrons or leptons. **Hadrons** interact via all four fundamental forces. They have size and structure and are not elementary particles. There are two types, **baryons** and **mesons**. Baryons, which generally are the most massive particles, have nonzero **baryon number** and a spin of $\frac{1}{2}$ or $\frac{3}{2}$. Mesons have baryon number zero and either zero or integral spin.

In all reactions and decays, quantities such as energy, linear momentum, angular momentum, electric charge, baryon number, and lepton number are strictly conserved. Certain particles have properties called **strangeness** and **charm**. These unusual properties are conserved in all decays and nuclear reactions except those that occur via the weak force.

A charged particle and its **antiparticle** have the same mass but opposite charge, and other properties will have opposite values, such as lepton number and baryon number. It is possible to produce particle–antiparticle pairs in nuclear reactions if the available energy is greater than $2mc^2$, where m is the mass of the particle (or antiparticle).

Leptons have no structure or size and are considered truly elementary. They interact only via the weak, gravitational, and electromagnetic forces. Six types of leptons exist: the electron e^- , the muon μ^- , and the tau τ^- , and their neutrinos ν_e , ν_μ , and ν_τ .

Theorists in elementary particle physics have postulated that all hadrons are composed of smaller units known as **quarks**, and experimental evidence agrees with this model. Quarks have fractional electric charge and come in six **flavors**: up (u), down (d), strange (s), charmed (c), top (t), and bottom (b). Each baryon contains three quarks, and each meson contains one quark and one antiquark.

According to the theory of **quantum chromodynamics**, quarks have a property called **color**; the force between quarks is referred to as the **strong force** or the **color force**. The strong force is now considered to be a fundamental force. The nuclear force, which was originally considered to be fundamental, is now understood to be a secondary effect of the strong force due to gluon exchanges between hadrons.

The electromagnetic and weak forces are now considered to be manifestations of a single force called the **electroweak force**. The combination of quantum chromodynamics and the electroweak theory is called the **Standard Model**.

The background microwave radiation discovered by Penzias and Wilson strongly suggests that the Universe started with a Big Bang about 14 billion years ago. The background radiation is equivalent to that of a black body at 3 K. Various astronomical measurements strongly suggest that the Universe is expanding. According to **Hubble's law**, distant galaxies are receding from the Earth at a speed $v = HR$, where H is the **Hubble constant**, $H \approx 22 \times 10^{-3} \text{ m}/(\text{s} \cdot \text{ly})$, and R is the distance from the Earth to the galaxy.

Objective Questions

1. denotes answer available in *Student Solutions Manual/Study Guide*

- What interactions affect protons in an atomic nucleus? More than one answer may be correct. (a) the nuclear interaction (b) the weak interaction (c) the electromagnetic interaction (d) the gravitational interaction
- In one experiment, two balls of clay of the same mass travel with the same speed v toward each other. They collide head-on and come to rest. In a second experiment, two clay balls of the same mass are again used. One ball hangs at rest, suspended from the ceiling by a thread. The second ball is fired toward the first at speed v , to collide, stick to the first ball, and continue to move forward. Is the kinetic energy that is transformed into internal energy in the first experiment (a) one-fourth as much as in the second experiment, (b) one-half as much as in the second experiment, (c) the same as in the second experiment, (d) twice as much as in the second experiment, or (e) four times as much as in the second experiment?
- The Ω^- particle is a baryon with spin $\frac{3}{2}$. Does the Ω^- particle have (a) three possible spin states in a magnetic field, (b) four possible spin states, (c) three times the charge of a spin $-\frac{1}{2}$ particle, or (d) three times the mass of a spin $-\frac{1}{2}$ particle, or (e) are none of those choices correct?
- Which of the following field particles mediates the strong force? (a) photon (b) gluon (c) graviton (d) W^\pm and Z bosons (e) none of those field particles
- An isolated stationary muon decays into an electron, an electron antineutrino, and a muon neutrino. Is the total kinetic energy of these three particles (a) zero, (b) small, or (c) large compared to their rest energies, or (d) none of those choices are possible?
- Define the average density of the solar system ρ_{SS} as the total mass of the Sun, planets, satellites, rings, asteroids, icy outliers, and comets, divided by the volume of a sphere around the Sun large enough to contain all these objects. The sphere extends about halfway to the nearest star, with a radius of approximately $2 \times 10^{16} \text{ m}$, about two light-years. How does this average density of the solar system compare with the critical density ρ_c required for the Universe to stop its Hubble's-law expansion? (a) ρ_{SS} is much greater than ρ_c . (b) ρ_{SS} is approximately or precisely equal to ρ_c . (c) ρ_{SS} is much less than ρ_c . (d) It is impossible to determine.
- When an electron and a positron meet at low speed in empty space, they annihilate each other to produce two 0.511-MeV gamma rays. What law would be violated if they produced one gamma ray with an energy of 1.02 MeV? (a) conservation of energy (b) conservation of momentum (c) conservation of charge (d) conservation of baryon number (e) conservation of electron lepton number
- Place the following events into the correct sequence from the earliest in the history of the Universe to the latest. (a) Neutral atoms form. (b) Protons and neutrons are no longer annihilated as fast as they form. (c) The Universe is a quark-gluon soup. (d) The Universe is like the core of a normal star today, forming helium by nuclear fusion. (e) The Universe is like the surface of a hot star today, consisting of a plasma of ionized atoms. (f) Polyatomic molecules form. (g) Solid materials form.

Conceptual Questions

1. denotes answer available in *Student Solutions Manual/Study Guide*

- The W and Z bosons were first produced at CERN in 1983 by causing a beam of protons and a beam of antiprotons to meet at high energy. Why was this discovery important?
- What are the differences between hadrons and leptons?
- Neutral atoms did not exist until hundreds of thousands of years after the Big Bang. Why?

4. Describe the properties of baryons and mesons and the important differences between them.
5. The Ξ^0 particle decays by the weak interaction according to the decay mode $\Xi^0 \rightarrow \Lambda^0 + \pi^0$. Would you expect this decay to be fast or slow? Explain.
6. In the theory of quantum chromodynamics, quarks come in three colors. How would you justify the statement that “all baryons and mesons are colorless”?
7. An antibaryon interacts with a meson. Can a baryon be produced in such an interaction? Explain.
8. Describe the essential features of the Standard Model of particle physics.
9. How many quarks are in each of the following: (a) a baryon, (b) an antibaryon, (c) a meson, (d) an antimeson? (e) How do you explain that baryons have half-integral spins, whereas mesons have spins of 0 or 1?
10. Are the laws of conservation of baryon number, lepton number, and strangeness based on fundamental properties of nature (as are the laws of conservation of momentum and energy, for example)? Explain.
11. Name the four fundamental interactions and the field particle that mediates each.
12. How did Edwin Hubble determine in 1928 that the Universe is expanding?
13. Kaons all decay into final states that contain no protons or neutrons. What is the baryon number for kaons?

Problems



The problems found in this chapter may be assigned online in Enhanced WebAssign

1. straightforward; 2. intermediate;
3. challenging

1. full solution available in the *Student Solutions Manual/Study Guide*



Analysis Model tutorial available in Enhanced WebAssign



Guided Problem



Master It tutorial available in Enhanced WebAssign



Watch It video solution available in Enhanced WebAssign

Section 46.1 The Fundamental Forces in Nature

Section 46.2 Positrons and Other Antiparticles

1. Model a penny as 3.10 g of pure copper. Consider an anti-penny minted from 3.10 g of copper anti-atoms, each with 29 positrons in orbit around a nucleus comprising 29 antiprotons and 34 or 36 antineutrons. (a) Find the energy released if the two coins collide. (b) Find the value of this energy at the unit price of \$0.11/kWh, a representative retail rate for energy from the electric company.
2. Two photons are produced when a proton and an anti-proton annihilate each other. In the reference frame in which the center of mass of the proton–antiproton system is stationary, what are (a) the minimum frequency and (b) the corresponding wavelength of each photon?
3. A photon produces a proton–antiproton pair according to the reaction $\gamma \rightarrow p + \bar{p}$. (a) What is the minimum possible frequency of the photon? (b) What is its wavelength?
4. At some time in your life, you may find yourself in a hospital to have a PET, or positron-emission tomography, scan. In the procedure, a radioactive element that undergoes e^+ decay is introduced into your body. The equipment detects the gamma rays that result from pair annihilation when the emitted positron encoun-

ters an electron in your body’s tissue. During such a scan, suppose you receive an injection of glucose containing on the order of 10^{10} atoms of ^{14}O , with half-life 70.6 s. Assume the oxygen remaining after 5 min is uniformly distributed through 2 L of blood. What is then the order of magnitude of the oxygen atoms’ activity in 1 cm^3 of the blood?

5. A photon with an energy $E_\gamma = 2.09\text{ GeV}$ creates a proton–antiproton pair in which the proton has a kinetic energy of 95.0 MeV. What is the kinetic energy of the antiproton? *Note:* $m_p c^2 = 938.3\text{ MeV}$.

Section 46.3 Mesons and the Beginning of Particle Physics

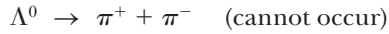
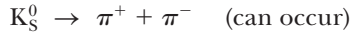
6. One mediator of the weak interaction is the Z^0 boson, with mass $91\text{ GeV}/c^2$. Use this information to find the order of magnitude of the range of the weak interaction.
7. (a) Prove that the exchange of a virtual particle of mass m can be associated with a force with a range given by

$$d \approx \frac{1}{4\pi mc^2} = \frac{98.7}{mc^2}$$

where d is in nanometers and mc^2 is in electron volts. (b) State the pattern of dependence of the range on the mass. (c) What is the range of the force that might be produced by the virtual exchange of a proton?

Section 46.4 Classification of Particles**Section 46.5 Conservation Laws**

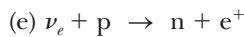
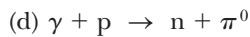

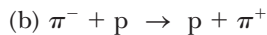
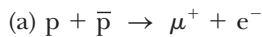
8. The first of the following two reactions can occur, but the second cannot. Explain.



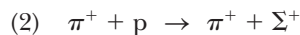
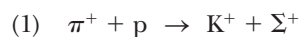
9. A neutral pion at rest decays into two photons according to $\pi^0 \rightarrow \gamma + \gamma$. Find the (a) energy, (b) momentum, and (c) frequency of each photon.

10. When a high-energy proton or pion traveling near the speed of light collides with a nucleus, it travels an average distance of 3×10^{-15} m before interacting. From this information, find the order of magnitude of the time interval required for the strong interaction to occur.

11. Each of the following reactions is forbidden. Determine what conservation laws are violated for each reaction.



12. (a) Show that baryon number and charge are conserved in the following reactions of a pion with a proton:

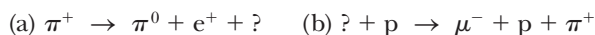


- (b) The first reaction is observed, but the second never occurs. Explain.

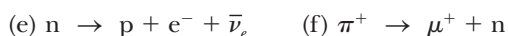
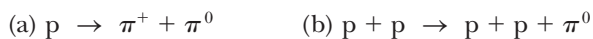
13. The following reactions or decays involve one or more neutrinos. In each case, supply the missing neutrino (ν_e , ν_μ , or ν_τ) or antineutrino.



14. Determine the type of neutrino or antineutrino involved in each of the following processes.



15. Determine which of the following reactions can occur. For those that cannot occur, determine the conservation law (or laws) violated.



16. Occasionally, high-energy muons collide with electrons and produce two neutrinos according to the reaction $\mu^+ + e^- \rightarrow 2\nu$. What kind of neutrinos are they?

17. A K_S^0 particle at rest decays into a π^+ and a π^- . The mass of the K_S^0 is $497.7 \text{ MeV}/c^2$, and the mass of each π meson is $139.6 \text{ MeV}/c^2$. What is the speed of each pion?

18. (a) Show that the proton-decay $p \rightarrow e^+ + \gamma$ cannot occur because it violates the conservation of baryon number. (b) **What If?** Imagine that this reaction does occur and the proton is initially at rest. Determine the energies and magnitudes of the momentum of the positron and photon after the reaction. (c) Determine the speed of the positron after the reaction.

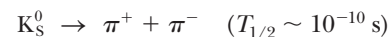
19. A Λ^0 particle at rest decays into a proton and a π^- meson. (a) Use the data in Table 46.2 to find the Q value for this decay in MeV. (b) What is the total kinetic energy shared by the proton and the π^- meson after the decay? (c) What is the total momentum shared by the proton and the π^- meson? (d) The proton and the π^- meson have momenta with the same magnitude after the decay. Do they have equal kinetic energies? Explain.

Section 46.6 Strange Particles and Strangeness

20. The neutral meson ρ^0 decays by the strong interaction into two pions:

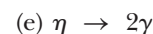


The neutral kaon also decays into two pions:




How do you explain the difference in half-lives?

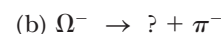
21. Which of the following processes are allowed by the strong interaction, the electromagnetic interaction, the weak interaction, or no interaction at all?



22. For each of the following forbidden decays, determine what conservation laws are violated.



23. Fill in the missing particle. Assume reaction (a) occurs via the strong interaction and reactions (b) and (c) involve the weak interaction. Assume also the total strangeness changes by one unit if strangeness is not conserved.



24. Identify the conserved quantities in the following processes.

- (a) $\Xi^- \rightarrow \Lambda^0 + \mu^- + \nu_\mu$ (b) $K_S^0 \rightarrow 2\pi^0$
 (c) $K^- + p \rightarrow \Sigma^0 + n$ (d) $\Sigma^0 \rightarrow \Lambda^0 + \gamma$
 (e) $e^+ + e^- \rightarrow \mu^+ + \mu^-$ (f) $\bar{p} + n \rightarrow \bar{\Lambda}^0 + \Sigma^-$
 (g) Which reactions cannot occur? Why not?

25. Determine whether or not strangeness is conserved in the following decays and reactions.

- (a) $\Lambda^0 \rightarrow p + \pi^-$ (b) $\pi^- + p \rightarrow \Lambda^0 + K^0$
 (c) $\bar{p} + p \rightarrow \bar{\Lambda}^0 + \Lambda^0$ (d) $\pi^- + p \rightarrow \pi^- + \Sigma^+$
 (e) $\Xi^- \rightarrow \Lambda^0 + \pi^-$ (f) $\Xi^0 \rightarrow p + \pi^-$

26. The particle decay $\Sigma^+ \rightarrow \pi^+ + n$ is observed in a bubble chamber. Figure P46.26 represents the curved tracks of the particles Σ^+ and π^+ and the invisible track of the neutron in the presence of a uniform magnetic field of 1.15 T directed out of the page. The measured radii of curvature are 1.99 m for the Σ^+ particle and 0.580 m for the π^+ particle. From this information, we wish to determine the mass of the Σ^+ particle. (a) Find the magnitudes of the momenta of the Σ^+ and the π^+ particles in units of MeV/c. (b) The angle between the momenta of the Σ^+ and the π^+ particles at the moment of decay is $\theta = 64.5^\circ$. Find the magnitude of the momentum of the neutron. (c) Calculate the total energy of the π^+ particle and of the neutron from their known masses ($m_\pi = 139.6 \text{ MeV}/c^2$, $m_n = 939.6 \text{ MeV}/c^2$) and the relativistic energy–momentum relation. (d) What is the total energy of the Σ^+ particle? (e) Calculate the mass of the Σ^+ particle. (f) Compare the mass with the value in Table 46.2.

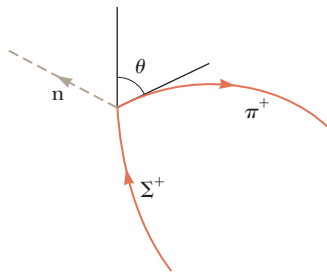


Figure P46.26

27. If a K_S^0 meson at rest decays in 0.900×10^{-10} s, how far does a K_S^0 meson travel if it is moving at $0.960c$?

Section 46.7 Finding Patterns in the Particles

Section 46.8 Quarks

Section 46.9 Multicolored Quarks

Section 46.10 The Standard Model

Problem 89 in Chapter 39 can be assigned with Section 46.10.

28. The quark compositions of the K^0 and Λ^0 particles are $d\bar{s}$ and uds , respectively. Show that the charge, baryon

number, and strangeness of these particles equal the sums of these numbers for the quark constituents.

29. The reaction $\pi^- + p \rightarrow K^0 + \Lambda^0$ occurs with high probability, whereas the reaction $\pi^- + p \rightarrow K^0 + n$ never occurs. Analyze these reactions at the quark level. Show that the first reaction conserves the total number of each type of quark and the second reaction does not.
30. Identify the particles corresponding to the quark states (a) suu , (b) $\bar{u}d$, (c) $\bar{s}d$, and (d) ssd .
31. The quark composition of the proton is uud , whereas that of the neutron is udd . Show that the charge, baryon number, and strangeness of these particles equal the sums of these numbers for their quark constituents.
32. Analyze each of the following reactions in terms of constituent quarks and show that each type of quark is conserved. (a) $\pi^+ + p \rightarrow K^+ + \Sigma^+$ (b) $K^- + p \rightarrow K^+ + K^0 + \Omega^-$ (c) Determine the quarks in the final particle for this reaction: $p + p \rightarrow K^0 + p + \pi^+ + ?$ (d) In the reaction in part (c), identify the mystery particle.
33. What is the electrical charge of the baryons with the quark compositions (a) $\bar{u}\bar{u}d$ and (b) $\bar{u}d\bar{d}$ (c) What are these baryons called?
34. Find the number of electrons, and of each species of quark, in 1 L of water.
35. A Σ^0 particle traveling through matter strikes a proton; then a Σ^+ and a gamma ray as well as a third particle emerge. Use the quark model of each to determine the identity of the third particle.
36. **What If?** Imagine that binding energies could be ignored. Find the masses of the u and d quarks from the masses of the proton and neutron.

Section 46.11 The Cosmic Connection

Problem 21 in Chapter 39 can be assigned with this section.

37. **Review.** Refer to Section 39.4. Prove that the Doppler shift in wavelength of electromagnetic waves is described by

$$\lambda' = \lambda \sqrt{\frac{1 + v/c}{1 - v/c}}$$

where λ' is the wavelength measured by an observer moving at speed v away from a source radiating waves of wavelength λ .

38. Gravitation and other forces prevent Hubble's-law expansion from taking place except in systems larger than clusters of galaxies. **What If?** Imagine that these forces could be ignored and all distances expanded at a rate described by the Hubble constant of $22 \times 10^{-3} \text{ m}/(\text{s} \cdot \text{ly})$. (a) At what rate would the 1.85-m height of a basketball player be increasing? (b) At what rate would the distance between the Earth and the Moon be increasing?

39. **Review.** The cosmic background radiation is blackbody radiation from a source at a temperature of 2.73 K.

- (a) Use Wien's law to determine the wavelength at which this radiation has its maximum intensity. (b) In what part of the electromagnetic spectrum is the peak of the distribution?
40. Assume dark matter exists throughout space with a uniform density of $6.00 \times 10^{-28} \text{ kg/m}^3$. (a) Find the amount of such dark matter inside a sphere centered on the Sun, having the Earth's orbit as its equator. (b) Explain whether the gravitational field of this dark matter would have a measurable effect on the Earth's revolution.
41. The early Universe was dense with gamma-ray photons of energy $\sim k_B T$ and at such a high temperature that protons and antiprotons were created by the process $\gamma \rightarrow p + \bar{p}$ as rapidly as they annihilated each other. As the Universe cooled in adiabatic expansion, its temperature fell below a certain value and proton pair production became rare. At that time, slightly more protons than antiprotons existed, and essentially all the protons in the Universe today date from that time. (a) Estimate the order of magnitude of the temperature of the Universe when protons condensed out. (b) Estimate the order of magnitude of the temperature of the Universe when electrons condensed out.
42. If the average density of the Universe is small compared with the critical density, the expansion of the Universe described by Hubble's law proceeds with speeds that are nearly constant over time. (a) Prove that in this case the age of the Universe is given by the inverse of the Hubble constant. (b) Calculate $1/H$ and express it in years.
43. **Review.** A star moving away from the Earth at $0.280c$ emits radiation that we measure to be most intense at the wavelength 500 nm. Determine the surface temperature of this star.
44. **Review.** Use Stefan's law to find the intensity of the cosmic background radiation emitted by the fireball of the Big Bang at a temperature of 2.73 K.
45. **M** The first quasar to be identified and the brightest found to date, 3C 273 in the constellation Virgo, was observed to be moving away from the Earth at such high speed that the observed blue 434-nm H_γ line of hydrogen is Doppler-shifted to 510 nm, in the green portion of the spectrum. (a) How fast is the quasar receding? (b) Edwin Hubble discovered that all objects outside the local group of galaxies are moving away from us, with speeds v proportional to their distances R . Hubble's law is expressed as $v = HR$, where the Hubble constant has the approximate value $H \approx 22 \times 10^{-3} \text{ m/(s} \cdot \text{ly)}$. Determine the distance from the Earth to this quasar.
46. The various spectral lines observed in the light from a distant quasar have longer wavelengths λ'_n than the wavelengths λ_n measured in light from a stationary source. Here n is an index taking different values for different spectral lines. The fractional change in wavelength toward the red is the same for all spectral lines. That is, the Doppler redshift parameter Z defined by
- $$Z = \frac{\lambda'_n - \lambda_n}{\lambda_n}$$
- is common to all spectral lines for one object. In terms of Z , use Hubble's law to determine (a) the speed of recession of the quasar and (b) the distance from the Earth to this quasar.
47. Using Hubble's law, find the wavelength of the 590-nm sodium line emitted from galaxies (a) 2.00×10^6 ly, (b) 2.00×10^8 ly, and (c) 2.00×10^9 ly away from the Earth.
48. The visible section of the Universe is a sphere centered on the bridge of your nose, with radius 13.7 billion light-years. (a) Explain why the visible Universe is getting larger, with its radius increasing by one light-year in every year. (b) Find the rate at which the volume of the visible section of the Universe is increasing.
49. In Section 13.6, we discussed dark matter along with one proposal for the origin of dark matter: WIMPs, or *weakly interacting massive particles*. Another proposal is that dark matter consists of large planet-sized objects, called MACHOs, or *massive astrophysical compact halo objects*, that drift through interstellar space and are not bound to a solar system. Whether WIMPs or MACHOs, suppose astronomers perform theoretical calculations and determine the average density of the observable Universe to be $1.20\rho_c$. If this value were correct, how many times larger will the Universe become before it begins to collapse? That is, by what factor will the distance between remote galaxies increase in the future?

Section 46.12 Problems and Perspectives

50. Classical general relativity views the structure of space-time as deterministic and well defined down to arbitrarily small distances. On the other hand, quantum general relativity forbids distances smaller than the Planck length given by $L = (\hbar G/c^3)^{1/2}$. (a) Calculate the value of the Planck length. The quantum limitation suggests that after the Big Bang, when all the presently observable section of the Universe was contained within a point-like singularity, nothing could be observed until that singularity grew larger than the Planck length. Because the size of the singularity grew at the speed of light, we can infer that no observations were possible during the time interval required for light to travel the Planck length. (b) Calculate this time interval, known as the Planck time T , and state how it compares with the ultrahot epoch mentioned in the text.

Additional Problems

51. For each of the following decays or reactions, name at least one conservation law that prevents it from occurring.
- (a) $\pi^- + p \rightarrow \Sigma^+ + \pi^0$
- (b) $\mu^- \rightarrow \pi^- + \nu_e$
- (c) $p \rightarrow \pi^+ + \pi^+ + \pi^-$


52. Identify the unknown particle on the left side of the following reaction:

53. Assume that the half-life of free neutrons is 614 s. What fraction of a group of free thermal neutrons with kinetic energy 0.040 0 eV will decay before traveling a distance of 10.0 km?

54. Why is the following situation impossible? A gamma-ray photon with energy 1.05 MeV strikes a stationary electron, causing the following reaction to occur:

Assume all three final particles move with the same speed in the same direction after the reaction.

55. **Review.** Supernova Shelton 1987A, located approximately 170 000 ly from the Earth, is estimated to have emitted a burst of neutrinos carrying energy (Fig. P46.55). Suppose the average neutrino energy was 6 MeV and your mother's body presented cross-sectional area 5 000 cm². To an order of magnitude, how many of these neutrinos passed through her?



Australian Astronomical Observatory, photography by David Malin from AAT Plates

Figure P46.55 Problems 55 and 72.

The energy flux carried by neutrinos from the Sun is estimated to be on the order of 0.400 W/m² at the

Earth's surface. Estimate the fractional mass loss of the Sun over 10 yr due to the emission of neutrinos. The mass of the Sun is 1.989 × 10³⁰ kg. The Earth–Sun distance is equal to 1.496 × 10⁸ km.

57. Hubble's law can be stated in vector form as $\mathbf{v} = H_0 \mathbf{r}$. Outside the local group of galaxies, all objects are moving away from us with velocities proportional to their positions relative to us. In this form, it sounds as if our location in the Universe is specially privileged. Prove that Hubble's law is equally true for an observer elsewhere in the Universe. Proceed as follows. Assume we are at the origin of coordinates, one galaxy cluster is at location \mathbf{r}_1 and has velocity \mathbf{v}_1 relative to us, and another galaxy cluster has position vector \mathbf{r}_2 and velocity \mathbf{v}_2 . Suppose the speeds are nonrelativistic. Consider the frame of reference of an observer in the first of these galaxy clusters. (a) Show that our velocity relative to her, together with the position vector of our galaxy cluster from hers, satisfies Hubble's law. (b) Show that the position and velocity of cluster 2 relative to cluster 1 satisfy Hubble's law.

58. A π^+ meson at rest decays according to $\pi^+ \rightarrow \mu^+ + \nu_\mu$. Assume the antineutrino has no mass and moves off with the speed of light. Take $m_\pi = 139.6$ MeV/c² and $m_\mu = 105.7$ MeV/c². What is the energy carried off by the neutrino?

59. An unstable particle, initially at rest, decays into a proton (rest energy 938.3 MeV) and a negative pion (rest energy 139.6 MeV). A uniform magnetic field of 0.250 T exists perpendicular to the velocities of the created particles. The radius of curvature of each track is found to be 1.33 m. What is the mass of the original unstable particle?

60. An unstable particle, initially at rest, decays into a positively charged particle of charge q_1 and rest energy E_1 and a negatively charged particle of charge q_2 and rest energy E_2 . A uniform magnetic field of magnitude B exists perpendicular to the velocities of the created particles. The radius of curvature of each track is r . What is the mass of the original unstable particle?

61. (a) What processes are described by the Feynman diagrams in Figure P46.61? (b) What is the exchanged particle in each process?

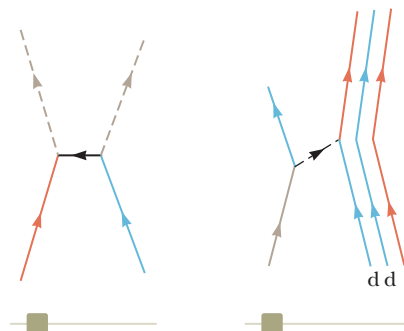


Figure P46.61

62. Identify the mediators for the two interactions described in the Feynman diagrams shown in Figure P46.62.

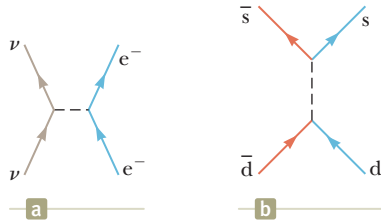
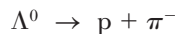


Figure P46.62

63. **Review.** The energy required to excite an atom is on the order of 1 eV. As the temperature of the Universe dropped below a threshold, neutral atoms could form from plasma and the Universe became transparent. Use the Boltzmann distribution function e^{-E/k_bT} to find the order of magnitude of the threshold temperature at which 1.00% of a population of photons has energy greater than 1.00 eV.
64. A Σ^0 particle at rest decays according to $\Sigma^0 \rightarrow \Lambda^0 + \gamma$. Find the gamma-ray energy.
65. Two protons approach each other head-on, each with 70.4 MeV of kinetic energy, and engage in a reaction in which a proton and positive pion emerge at rest. What third particle, obviously uncharged and therefore difficult to detect, must have been created?
66. Two protons approach each other with velocities of equal magnitude in opposite directions. What is the minimum kinetic energy of each proton if the two are to produce a π^+ meson at rest in the reaction $p + p \rightarrow p + n + \pi^+$?

Challenge Problems

67. Determine the kinetic energies of the proton and pion resulting from the decay of a Λ^0 at rest:



68. A particle of mass m_1 is fired at a stationary particle of mass m_2 , and a reaction takes place in which new particles are created out of the incident kinetic energy. Taken together, the product particles have total mass m_3 . The minimum kinetic energy the bombarding particle must have so as to induce the reaction is called the threshold energy. At this energy, the kinetic energy of the products is a minimum, so the fraction of the incident kinetic energy that is available to create new particles is a maximum. This condition is met when all the product particles have the same velocity and the particles have no kinetic energy of motion relative to one another. (a) By using conservation of relativistic energy and momentum and the relativistic energy–momentum relation, show that the threshold kinetic energy is

$$K_{\min} = \frac{[m_3^2 - (m_1 + m_2)^2]c^2}{2m_2}$$

Calculate the threshold kinetic energy for each of the following reactions: (b) $p + p \rightarrow p + p + p + \bar{p}$ (one of the initial protons is at rest, and antiprotons are produced); (c) $\pi^- + p \rightarrow K^0 + \Lambda^0$ (the proton is at rest, and strange particles are produced); (d) $p + p \rightarrow p + p + \pi^0$ (one of the initial protons is at rest, and pions are produced); and (e) $p + \bar{p} \rightarrow Z^0$ (one of the initial particles is at rest, and Z^0 particles of mass $91.2 \text{ GeV}/c^2$ are produced).

69. A free neutron beta decays by creating a proton, an electron, and an antineutrino according to the reaction $n \rightarrow p + e^- + \bar{\nu}$. **What If?** Imagine that a free neutron were to decay by creating a proton and electron according to the reaction $n \rightarrow p + e^-$ and assume the neutron is initially at rest in the laboratory. (a) Determine the energy released in this reaction. (b) Energy and momentum are conserved in the reaction. Determine the speeds of the proton and the electron after the reaction. (c) Is either of these particles moving at a relativistic speed? Explain.
70. The cosmic rays of highest energy are mostly protons, accelerated by unknown sources. Their spectrum shows a cutoff at an energy on the order of 10^{20} eV. Above that energy, a proton interacts with a photon of cosmic microwave background radiation to produce mesons, for example, according to $p + \gamma \rightarrow p + \pi^0$. Demonstrate this fact by taking the following steps. (a) Find the minimum photon energy required to produce this reaction in the reference frame where the total momentum of the photon–proton system is zero. The reaction was observed experimentally in the 1950s with photons of a few hundred MeV. (b) Use Wien's displacement law to find the wavelength of a photon at the peak of the blackbody spectrum of the primordial microwave background radiation, with a temperature of 2.73 K. (c) Find the energy of this photon. (d) Consider the reaction in part (a) in a moving reference frame so that the photon is the same as that in part (c). Calculate the energy of the proton in this frame, which represents the Earth reference frame.
71. Assume the average density of the Universe is equal to the critical density. (a) Prove that the age of the Universe is given by $2/(3H)$. (b) Calculate $2/(3H)$ and express it in years.
72. The most recent naked-eye supernova was Supernova Shelton 1987A (Fig. P46.55). It was 170 000 ly away in the Large Magellanic Cloud, a satellite galaxy of the Milky Way. Approximately 3 h before its optical brightening was noticed, two neutrino detection experiments simultaneously registered the first neutrinos from an identified source other than the Sun. The Irvine–Michigan–Brookhaven experiment in a salt mine in Ohio registered eight neutrinos over a 6-s period, and the Kamiokande II experiment in a zinc mine in Japan counted eleven neutrinos in 13 s. (Because the supernova is far south in the sky, these neutrinos entered the detectors from below. They passed through the Earth before they were by chance absorbed by nuclei in the detectors.) The neutrino energies were between approximately 8 MeV and

40 MeV. If neutrinos have no mass, neutrinos of all energies should travel together at the speed of light, and the data are consistent with this possibility. The arrival times could vary simply because neutrinos were created at different moments as the core of the star collapsed into a neutron star. If neutrinos have nonzero mass, lower-energy neutrinos should move comparatively slowly. The data are consistent with a 10-MeV neutrino requiring at most approximately 10 s more than a photon would require to travel from the supernova to us. Find the upper limit that this observation sets on the mass of a neutrino. (Other evidence sets an even tighter limit.)

73. A rocket engine for space travel using photon drive and matter–antimatter annihilation has been suggested. Suppose the fuel for a short-duration burn consists of N protons and N antiprotons, each with mass m . (a) Assume all the fuel is annihilated to produce photons. When the photons are ejected from the rocket, what momentum can be imparted to it? (b) **What If?** If half the protons and antiprotons annihilate each other and the energy released is used to eject the remaining particles, what momentum could be given to the rocket? (c) Which scheme results in the greater change in speed for the rocket?

Tables

A

Table A.1 Conversion Factors

Length

	m	cm	km	in.	ft	mi
1 meter	1	10^2	10^{-3}	39.37	3.281	6.214×10^{-4}
1 centimeter	10^{-2}	1	10^{-5}	0.393 7	3.281×10^{-2}	6.214×10^{-6}
1 kilometer	10^3	10^5	1	3.937×10^4	3.281×10^3	0.621 4
1 inch	2.540×10^{-2}	2.540	2.540×10^{-5}	1	8.333×10^{-2}	1.578×10^{-5}
1 foot	0.304 8	30.48	3.048×10^{-4}	12	1	1.894×10^{-4}
1 mile	1 609	1.609×10^5	1.609	6.336×10^4	5 280	1

Mass

	kg	g	slug	u
1 kilogram	1	10^3	6.852×10^{-2}	6.024×10^{26}
1 gram	10^{-3}	1	6.852×10^{-5}	6.024×10^{23}
1 slug	14.59	1.459×10^4	1	8.789×10^{27}
1 atomic mass unit	1.660×10^{-27}	1.660×10^{-24}	1.137×10^{-28}	1

Note: 1 metric ton = 1 000 kg.

Time

	s	min	h	day	yr
1 second	1	1.667×10^{-2}	2.778×10^{-4}	1.157×10^{-5}	3.169×10^{-8}
1 minute	60	1	1.667×10^{-2}	6.994×10^{-4}	1.901×10^{-6}
1 hour	3 600	60	1	4.167×10^{-2}	1.141×10^{-4}
1 day	8.640×10^4	1 440	24	1	2.738×10^{-5}
1 year	3.156×10^7	5.259×10^5	8.766×10^3	365.2	1

Speed

	m/s	cm/s	ft/s	mi/h
1 meter per second	1	10^2	3.281	2.237
1 centimeter per second	10^{-2}	1	3.281×10^{-2}	2.237×10^{-2}
1 foot per second	0.304 8	30.48	1	0.681 8
1 mile per hour	0.447 0	44.70	1.467	1

Note: 1 mi/min = 60 mi/h = 88 ft/s.

Force

	N	lb
1 newton	1	0.224 8
1 pound	4.448	1

(Continued)

Table A.1 Conversion Factors (*continued*)**Energy, Energy Transfer**

	J	ft · lb	eV
1 joule	1	0.737 6	6.242×10^{18}
1 foot-pound	1.356	1	8.464×10^{18}
1 electron volt	1.602×10^{-19}	1.182×10^{-19}	1
1 calorie	4.186	3.087	2.613×10^{19}
1 British thermal unit	1.055×10^3	7.779×10^2	6.585×10^{21}
1 kilowatt-hour	3.600×10^6	2.655×10^6	2.247×10^{25}

	cal	Btu	kWh
1 joule	0.238 9	9.481×10^{-4}	2.778×10^{-7}
1 foot-pound	0.323 9	1.285×10^{-3}	3.766×10^{-7}
1 electron volt	3.827×10^{-20}	1.519×10^{-22}	4.450×10^{-26}
1 calorie	1	3.968×10^{-3}	1.163×10^{-6}
1 British thermal unit	2.520×10^2	1	2.930×10^{-4}
1 kilowatt-hour	8.601×10^5	3.413×10^2	1

Pressure

	Pa	atm
1 pascal	1	9.869×10^{-6}
1 atmosphere	1.013×10^5	1
1 centimeter mercury ^a	1.333×10^3	1.316×10^{-2}
1 pound per square inch	6.895×10^3	6.805×10^{-2}
1 pound per square foot	47.88	4.725×10^{-4}

	cm Hg	lb/in.²	lb/ft²
1 pascal	7.501×10^{-4}	1.450×10^{-4}	2.089×10^{-2}
1 atmosphere	76	14.70	2.116×10^3
1 centimeter mercury ^a	1	0.194 3	27.85
1 pound per square inch	5.171	1	144
1 pound per square foot	3.591×10^{-2}	6.944×10^{-3}	1

^aAt 0°C and at a location where the free-fall acceleration has its “standard” value, 9.806 65 m/s².

Table A.2 Symbols, Dimensions, and Units of Physical Quantities

Quantity	Common Symbol	Unit^a	Dimensions^b	Unit in Terms of Base SI Units
Acceleration	\vec{a}	m/s ²	L/T ²	m/s ²
Amount of substance	n	MOLE		mol
Angle	θ, ϕ	radian (rad)	1	
Angular acceleration	$\vec{\alpha}$	rad/s ²	T ⁻²	s ⁻²
Angular frequency	ω	rad/s	T ⁻¹	s ⁻¹
Angular momentum	\vec{L}	kg · m ² /s	ML ² /T	kg · m ² /s
Angular velocity	$\vec{\omega}$	rad/s	T ⁻¹	s ⁻¹
Area	A	m ²	L ²	m ²
Atomic number	Z			
Capacitance	C	farad (F)	Q ² T ² /ML ²	A ² · s ⁴ /kg · m ²
Charge	q, Q, e	coulomb (C)	Q	A · s

(Continued)

Table A.2 Symbols, Dimensions, and Units of Physical Quantities (*continued*)

Quantity	Common Symbol	Unit ^a	Dimensions ^b	Unit in Terms of Base SI Units
Charge density				
Line	λ	C/m	Q/L	A · s/m
Surface	σ	C/m ²	Q/L ²	A · s/m ²
Volume	ρ	C/m ³	Q/L ³	A · s/m ³
Conductivity	σ	1/Ω · m	Q ² T/ML ³	A ² · s ³ /kg · m ³
Current	I	AMPERE	Q/T	A
Current density	J	A/m ²	Q/TL ²	A/m ²
Density	ρ	kg/m ³	M/L ³	kg/m ³
Dielectric constant	κ			
Electric dipole moment	\vec{p}	C · m	QL	A · s · m
Electric field	\vec{E}	V/m	ML/QT ²	kg · m/A · s ³
Electric flux	Φ_E	V · m	ML ³ /QT ²	kg · m ³ /A · s ³
Electromotive force	\mathcal{E}	volt (V)	ML ² /QT ²	kg · m ² /A · s ³
Energy	E, U, K	joule (J)	ML ² /T ²	kg · m ² /s ²
Entropy	S	J/K	ML ² /T ² K	kg · m ² /s ² · K
Force	\vec{F}	newton (N)	ML/T ²	kg · m/s ²
Frequency	f	hertz (Hz)	T ⁻¹	s ⁻¹
Heat	Q	joule (J)	ML ² /T ²	kg · m ² /s ²
Inductance	L	henry (H)	ML ² /Q ²	kg · m ² /A ² · s ²
Length	ℓ, L	METER	L	m
Displacement	$\Delta x, \Delta \vec{r}$			
Distance	d, h			
Position	x, y, z, \vec{r}			
Magnetic dipole moment	$\vec{\mu}$	N · m/T	QL ² /T	A · m ²
Magnetic field	\vec{B}	tesla (T) (= Wb/m ²)	M/QT	kg/A · s ²
Magnetic flux	Φ_B	weber (Wb)	ML ² /QT	kg · m ² /A · s ²
Mass	m, M	KILOGRAM	M	kg
Molar specific heat	C	J/mol · K		kg · m ² /s ² · mol · K
Moment of inertia	I	kg · m ²	ML ²	kg · m ²
Momentum	\vec{p}	kg · m/s	ML/T	kg · m/s
Period	T	s	T	s
Permeability of free space	μ_0	N/A ² (= H/m)	ML/Q ²	kg · m/A ² · s ²
Permittivity of free space	ϵ_0	C ² /N · m ² (= F/m)	Q ² T ² /ML ³	A ² · s ⁴ /kg · m ³
Potential	V	volt (V)(= J/C)	ML ² /QT ²	kg · m ² /A · s ³
Power	P	watt (W)(= J/s)	ML ² /T ³	kg · m ² /s ³
Pressure	P	pascal (Pa)(= N/m ²)	M/LT ²	kg/m · s ²
Resistance	R	ohm (Ω)(= V/A)	ML ² /Q ² T	kg · m ² /A ² · s ³
Specific heat	c	J/kg · K	L ² /T ² K	m ² /s ² · K
Speed	v	m/s	L/T	m/s
Temperature	T	KELVIN	K	K
Time	t	SECOND	T	s
Torque	$\vec{\tau}$	N · m	ML ² /T ²	kg · m ² /s ²
Velocity	\vec{v}	m/s	L/T	m/s
Volume	V	m ³	L ³	m ³
Wavelength	λ	m	L	m
Work	W	joule (J)(= N · m)	ML ² /T ²	kg · m ² /s ²

^aThe base SI units are given in uppercase letters.^bThe symbols M, L, T, K, and Q denote mass, length, time, temperature, and charge, respectively.

Mathematics Review

This appendix in mathematics is intended as a brief review of operations and methods. Early in this course, you should be totally familiar with basic algebraic techniques, analytic geometry, and trigonometry. The sections on differential and integral calculus are more detailed and are intended for students who have difficulty applying calculus concepts to physical situations.

B.1 Scientific Notation

Many quantities used by scientists often have very large or very small values. The speed of light, for example, is about 300 000 000 m/s, and the ink required to make the dot over an *i* in this textbook has a mass of about 0.000 000 001 kg. Obviously, it is very cumbersome to read, write, and keep track of such numbers. We avoid this problem by using a method incorporating powers of the number 10:

$$10^0 = 1$$

$$10^1 = 10$$

$$10^2 = 10 \times 10 = 100$$

$$10^3 = 10 \times 10 \times 10 = 1\,000$$

$$10^4 = 10 \times 10 \times 10 \times 10 = 10\,000$$

$$10^5 = 10 \times 10 \times 10 \times 10 \times 10 = 100\,000$$

and so on. The number of zeros corresponds to the power to which ten is raised, called the **exponent** of ten. For example, the speed of light, 300 000 000 m/s, can be expressed as 3.00×10^8 m/s.

In this method, some representative numbers smaller than unity are the following:

$$10^{-1} = \frac{1}{10} = 0.1$$

$$10^{-2} = \frac{1}{10 \times 10} = 0.01$$

$$10^{-3} = \frac{1}{10 \times 10 \times 10} = 0.001$$

$$10^{-4} = \frac{1}{10 \times 10 \times 10 \times 10} = 0.000\,1$$

$$10^{-5} = \frac{1}{10 \times 10 \times 10 \times 10 \times 10} = 0.000\,01$$

In these cases, the number of places the decimal point is to the left of the digit 1 equals the value of the (negative) exponent. Numbers expressed as some power of ten multiplied by another number between one and ten are said to be in **scientific notation**. For example, the scientific notation for 5 943 000 000 is 5.943×10^9 and that for 0.000 083 2 is 8.32×10^{-5} .

When numbers expressed in scientific notation are being multiplied, the following general rule is very useful:

$$10^n \times 10^m = 10^{n+m} \quad (\text{B.1})$$

where n and m can be *any* numbers (not necessarily integers). For example, $10^2 \times 10^5 = 10^7$. The rule also applies if one of the exponents is negative: $10^3 \times 10^{-8} = 10^{-5}$.

When dividing numbers expressed in scientific notation, note that

$$\frac{10^n}{10^m} = 10^n \times 10^{-m} = 10^{n-m} \quad (\text{B.2})$$

Exercises

With help from the preceding rules, verify the answers to the following equations:

1. $86\,400 = 8.64 \times 10^4$
2. $9\,816\,762.5 = 9.816\,762\,5 \times 10^6$
3. $0.000\,000\,039\,8 = 3.98 \times 10^{-8}$
4. $(4.0 \times 10^8)(9.0 \times 10^9) = 3.6 \times 10^{18}$
5. $(3.0 \times 10^7)(6.0 \times 10^{-12}) = 1.8 \times 10^{-4}$
6. $\frac{75 \times 10^{-11}}{5.0 \times 10^{-3}} = 1.5 \times 10^{-7}$
7. $\frac{(3 \times 10^6)(8 \times 10^{-2})}{(2 \times 10^{17})(6 \times 10^5)} = 2 \times 10^{-18}$

B.2 Algebra

Some Basic Rules

When algebraic operations are performed, the laws of arithmetic apply. Symbols such as x , y , and z are usually used to represent unspecified quantities, called the **unknowns**.

First, consider the equation

$$8x = 32$$

If we wish to solve for x , we can divide (or multiply) each side of the equation by the same factor without destroying the equality. In this case, if we divide both sides by 8, we have

$$\frac{8x}{8} = \frac{32}{8}$$

$$x = 4$$

Next consider the equation

$$x + 2 = 8$$

In this type of expression, we can add or subtract the same quantity from each side. If we subtract 2 from each side, we have

$$x + 2 - 2 = 8 - 2$$

$$x = 6$$

In general, if $x + a = b$, then $x = b - a$.

Now consider the equation

$$\frac{x}{5} = 9$$

If we multiply each side by 5, we are left with x on the left by itself and 45 on the right:

$$\left(\frac{x}{5}\right)(5) = 9 \times 5$$

$$x = 45$$

In all cases, *whatever operation is performed on the left side of the equality must also be performed on the right side.*

The following rules for multiplying, dividing, adding, and subtracting fractions should be recalled, where a , b , c , and d are four numbers:

	Rule	Example
Multiplying	$\left(\frac{a}{b}\right)\left(\frac{c}{d}\right) = \frac{ac}{bd}$	$\left(\frac{2}{3}\right)\left(\frac{4}{5}\right) = \frac{8}{15}$
Dividing	$\frac{(a/b)}{(c/d)} = \frac{ad}{bc}$	$\frac{2/3}{4/5} = \frac{(2)(5)}{(4)(3)} = \frac{10}{12}$
Adding	$\frac{a}{b} \pm \frac{c}{d} = \frac{ad \pm bc}{bd}$	$\frac{2}{3} - \frac{4}{5} = \frac{(2)(5) - (4)(3)}{(3)(5)} = -\frac{2}{15}$

Exercises

In the following exercises, solve for x .

Answers

- $a = \frac{1}{1+x}$ $x = \frac{1-a}{a}$
- $3x - 5 = 13$ $x = 6$
- $ax - 5 = bx + 2$ $x = \frac{7}{a-b}$
- $\frac{5}{2x+6} = \frac{3}{4x+8}$ $x = -\frac{11}{7}$

Powers

When powers of a given quantity x are multiplied, the following rule applies:

$$x^n x^m = x^{n+m} \quad (\text{B.3})$$

For example, $x^2 x^4 = x^{2+4} = x^6$.

When dividing the powers of a given quantity, the rule is

$$\frac{x^n}{x^m} = x^{n-m} \quad (\text{B.4})$$

For example, $x^8/x^2 = x^{8-2} = x^6$.

A power that is a fraction, such as $\frac{1}{3}$, corresponds to a root as follows:

$$x^{1/n} = \sqrt[n]{x} \quad (\text{B.5})$$

For example, $4^{1/3} = \sqrt[3]{4} = 1.5874$. (A scientific calculator is useful for such calculations.)

Finally, any quantity x^n raised to the m th power is

$$(x^n)^m = x^{nm} \quad (\text{B.6})$$

Table B.1 summarizes the rules of exponents.

Table B.1

Rules of Exponents

$$x^0 = 1$$

$$x^1 = x$$

$$x^n x^m = x^{n+m}$$

$$x^n/x^m = x^{n-m}$$

$$x^{1/n} = \sqrt[n]{x}$$

$$(x^n)^m = x^{nm}$$

Exercises

Verify the following equations:

- $3^2 \times 3^3 = 243$
- $x^5 x^{-8} = x^{-3}$

3. $x^{10}/x^{-5} = x^{15}$
4. $5^{1/3} = 1.709\ 976$ (Use your calculator.)
5. $60^{1/4} = 2.783\ 158$ (Use your calculator.)
6. $(x^4)^3 = x^{12}$

Factoring

Some useful formulas for factoring an equation are the following:

$$ax + ay + az = a(x + y + z) \quad \text{common factor}$$

$$a^2 + 2ab + b^2 = (a + b)^2 \quad \text{perfect square}$$

$$a^2 - b^2 = (a + b)(a - b) \quad \text{differences of squares}$$

Quadratic Equations

The general form of a quadratic equation is

$$ax^2 + bx + c = 0 \quad (\text{B.7})$$

where x is the unknown quantity and a , b , and c are numerical factors referred to as **coefficients** of the equation. This equation has two roots, given by

$$x = \frac{-b \pm \sqrt{b^2 - 4ac}}{2a} \quad (\text{B.8})$$

If $b^2 \geq 4ac$, the roots are real.

Example B.1

The equation $x^2 + 5x + 4 = 0$ has the following roots corresponding to the two signs of the square-root term:

$$x = \frac{-5 \pm \sqrt{5^2 - (4)(1)(4)}}{2(1)} = \frac{-5 \pm \sqrt{9}}{2} = \frac{-5 \pm 3}{2}$$

$$x_+ = \frac{-5 + 3}{2} = -1 \quad x_- = \frac{-5 - 3}{2} = -4$$

where x_+ refers to the root corresponding to the positive sign and x_- refers to the root corresponding to the negative sign.

Exercises

Solve the following quadratic equations:

Answers

1. $x^2 + 2x - 3 = 0$ $x_+ = 1$ $x_- = -3$
2. $2x^2 - 5x + 2 = 0$ $x_+ = 2$ $x_- = \frac{1}{2}$
3. $2x^2 - 4x - 9 = 0$ $x_+ = 1 + \sqrt{22}/2$ $x_- = 1 - \sqrt{22}/2$

Linear Equations

A linear equation has the general form

$$y = mx + b \quad (\text{B.9})$$

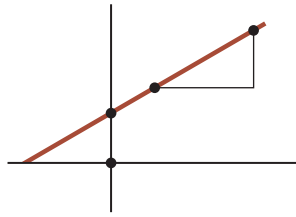


Figure B.1 A straight line graphed on an coordinate system. The slope of the line is the ratio of y to x .

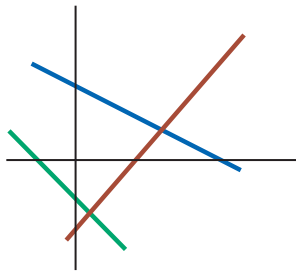


Figure B.2 The brown line has a positive slope and a negative y -intercept. The blue line has a negative slope and a positive y -intercept. The green line has a negative slope and a negative y -intercept.

where a and b are constants. This equation is referred to as linear because the graph of $y = ax + b$ versus x is a straight line as shown in Figure B.1. The constant b , called the **y -intercept**, represents the value of x at which the straight line intersects the y -axis. The constant a is equal to the **slope** of the straight line. If any two points on the straight line are specified by the coordinates (x_1, y_1) and (x_2, y_2) as in Figure B.1, the slope of the straight line can be expressed as

$$\text{Slope} = \frac{y_2 - y_1}{x_2 - x_1} \tag{B.10}$$

Note that a and b can have either positive or negative values. If $a > 0$, the straight line has a *positive* slope as in Figure B.1. If $a < 0$, the straight line has a *negative* slope. In Figure B.1, both a and b are positive. Three other possible situations are shown in Figure B.2.

Exercises

1. Draw graphs of the following straight lines: (a) $y = 3x + 5$ (b) $y = -2x + 3$ (c) $y = 5x - 2$
2. Find the slopes of the straight lines described in Exercise 1.

Answers (a) 5 (b) -2 (c) 5

3. Find the slopes of the straight lines that pass through the following sets of points: (a) $(0, 4)$ and $(4, 2)$ (b) $(0, 0)$ and $(2, -5)$ (c) $(-5, 2)$ and $(4, -1)$

Answers (a) $-1/2$ (b) $-5/2$ (c) $-3/9 = -1/3$

Solving Simultaneous Linear Equations

Consider the equation $3x + 2y = 15$, which has two unknowns, x and y . Such an equation does not have a unique solution. For example, $(x = 0, y = 7.5)$, $(x = 5, y = 0)$, and $(x = 2, y = -1.5)$ are all solutions to this equation.

If a problem has two unknowns, a unique solution is possible only if we have *two* pieces of information. In most common cases, those two pieces of information are equations. In general, if a problem has n unknowns, its solution requires n equations. To solve two simultaneous equations involving two unknowns, x and y , we solve one of the equations for x in terms of y and substitute this expression into the other equation.

In some cases, the two pieces of information may be (1) one equation and (2) a condition on the solutions. For example, suppose we have the equation $x + y = 1$ and the condition that x and y must be the smallest positive nonzero integers possible. Then, the single equation does not allow a unique solution, but the addition of the condition gives us that $x = 1$ and $y = 0$.

Example B.2

Solve the two simultaneous equations

$$(1) \quad x + y = -8$$

$$(2) \quad 2x - y = 4$$

SOLUTION

From Equation (2), $y = 2x - 4$. Substitution of this equation into Equation (1) gives

$$x + (2x - 4) = -8$$

$$3x - 4 = -8$$

B.2

3

1

Alternative Solution Multiply each term in Equation (1) by the factor 2 and add the result to Equation (2):

$$10x + 4y = -16$$

$$\begin{array}{r} 10x + 4y = -16 \\ 2(5x + 2y = -8) \\ \hline 12x + 8y = -12 \end{array}$$

1

3

Two linear equations containing two unknowns can also be solved by a graphical method. If the straight lines corresponding to the two equations are plotted in a conventional coordinate system, the intersection of the two lines represents the solution. For example, consider the two equations

$$\begin{aligned} 5x + 2y &= -1 \\ 2x + 3y &= -1 \end{aligned}$$

These equations are plotted in Figure B.3. The intersection of the two lines has the coordinates $x = 5$ and $y = 3$, which represents the solution to the equations. You should check this solution by the analytical technique discussed earlier.

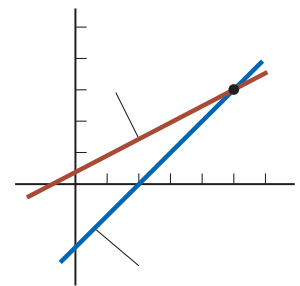


Figure B.3 A graphical solution for two linear equations.

Exercises

Solve the following pairs of simultaneous equations involving two unknowns:

Answers

5,

2. 65, 3.27

3. 2,

Logarithms

Suppose a quantity x is expressed as a power of some quantity

$$x = a^y \tag{B.11}$$

The number a is called the **base** number. The **logarithm** of x with respect to the base a is equal to the exponent to which the base must be raised to satisfy the expression

$$y = \log_a x \tag{B.12}$$

Conversely, the **antilogarithm** of x is the number

$$a^x = \text{antilog}_a x \tag{B.13}$$

In practice, the two bases most often used are base 10, called the *common* logarithm base, and base $e = 2.718\ 282$, called Euler's constant or the *natural* logarithm base. When common logarithms are used,

$$\log_{10} x \quad \text{or} \quad \log x \tag{B.14}$$

When natural logarithms are used,

$$\ln \quad \text{or} \quad \ln \quad \text{(B.15)}$$

For example, $\log_{10} 52 = 1.716$, so $\text{antilog } 1.716 = 10^{1.716} = 52$. Likewise, $\ln 52 = 3.951$, so $\text{antiln } 3.951 = e^{3.951} = 52$.

In general, note you can convert between base 10 and base e with the equality

$$\ln = 2.302585 \log_{10} \quad \text{(B.16)}$$

Finally, some useful properties of logarithms are the following:

$$\begin{aligned} \log ab &= \log a + \log b \\ \log \frac{a}{b} &= \log a - \log b \\ \log a^x &= x \log a \\ \log \log a &= \log \log a \quad \text{any base} \\ \ln e &= 1 \\ \ln 1 &= 0 \\ \ln \frac{1}{a} &= -\ln a \end{aligned}$$

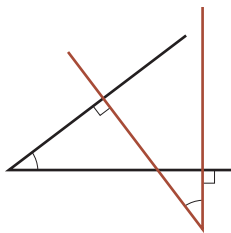


Figure B.4 The angles are equal because their sides are perpendicular.

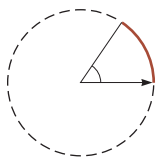


Figure B.5 The angle θ in radians is the ratio of the arc length to the radius of the circle.

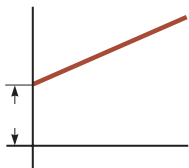


Figure B.6 A straight line with a slope of m and a y -intercept of b .

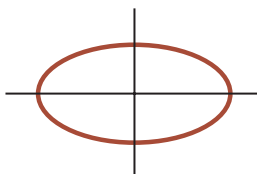


Figure B.7 An ellipse with semi-major axis a and semi-minor axis b .

B.3 Geometry

The **distance** between two points having coordinates (x_1, y_1) and (x_2, y_2) is

$$d = \sqrt{(x_2 - x_1)^2 + (y_2 - y_1)^2} \quad \text{(B.17)}$$

Two angles are equal if their sides are perpendicular, right side to right side and left side to left side. For example, the two angles marked in Figure B.4 are the same because of the perpendicularity of the sides of the angles. To distinguish the left and right sides of an angle, imagine standing at the angle's apex and facing into the angle.

Radian measure: The arc length s of a circular arc (Fig. B.5) is proportional to the radius r for a fixed value of θ (in radians):

$$s = r\theta \quad \text{(B.18)}$$

Table B.2 gives the **areas** and **volumes** for several geometric shapes used throughout this text.

The equation of a **straight line** (Fig. B.6) is

$$y = mx + b \quad \text{(B.19)}$$

where b is the y -intercept and m is the slope of the line.

The equation of a **circle** of radius r centered at the origin is

$$x^2 + y^2 = r^2 \quad \text{(B.20)}$$

The equation of an **ellipse** having the origin at its center (Fig. B.7) is


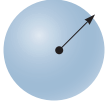




$$\frac{x^2}{a^2} + \frac{y^2}{b^2} = 1 \quad \text{(B.21)}$$

where a is the length of the semimajor axis (the longer one) and b is the length of the semiminor axis (the shorter one).

The equation of a **parabola** the vertex of which is at (h, k) (Fig. B.8) is

$$y - k = a(x - h)^2 \quad \text{(B.22)}$$

Table B.2 Useful Information for Geometry

Shape	Area or Volume
	 Surface area Volume
	 Lateral surface Volume
	 Surface area Volume

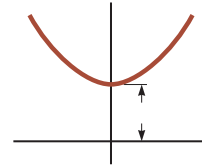


Figure B.8 A parabola with its vertex at

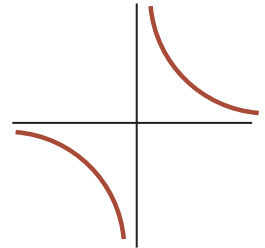


Figure B.9 A hyperbola.

The equation of a **rectangular hyperbola** (Fig. B.9) is

$$xy = \text{constant} \tag{B.23}$$

B.4 Trigonometry

That portion of mathematics based on the special properties of the right triangle is called trigonometry. By definition, a right triangle is a triangle containing a 90 angle. Consider the right triangle shown in Figure B.10, where side is opposite the angle θ , side is adjacent to the angle θ , and side is the hypotenuse of the triangle. The three basic trigonometric functions defined by such a triangle are the sine (sin), cosine (cos), and tangent (tan). In terms of the angle θ , these functions are defined as follows:

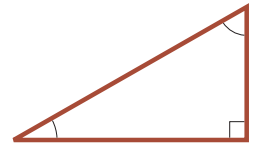


Figure B.10 A right triangle, used to define the basic functions of trigonometry.

$$\sin \theta = \frac{\text{side opposite}}{\text{hypotenuse}} \tag{B.24}$$

$$\cos \theta = \frac{\text{side adjacent to}}{\text{hypotenuse}} \tag{B.25}$$

$$\tan \theta = \frac{\text{side opposite}}{\text{side adjacent to}} \tag{B.26}$$

The Pythagorean theorem provides the following relationship among the sides of a right triangle:

$$\tag{B.27}$$

From the preceding definitions and the Pythagorean theorem, it follows that

$$\sin^2 \theta + \cos^2 \theta = 1$$

$$\tan \theta = \frac{\sin \theta}{\cos \theta}$$

The cosecant, secant, and cotangent functions are defined by

$$\csc \theta = \frac{1}{\sin \theta} \quad \sec \theta = \frac{1}{\cos \theta} \quad \cot \theta = \frac{1}{\tan \theta}$$

Table B.3 Some Trigonometric Identities

$\sin \theta + \cos \theta =$	$\csc \theta = \frac{1}{\sin \theta}$	$\cot \theta = \frac{\cos \theta}{\sin \theta}$
$\sec \theta = \frac{1}{\cos \theta}$	$\tan \theta = \frac{\sin \theta}{\cos \theta}$	$\cos \theta = \frac{1}{\sec \theta}$
$\sin 2\theta = 2 \sin \theta \cos \theta$	$\cos 2\theta = \cos^2 \theta - \sin^2 \theta$	$\cos \theta = 2 \sin \theta \cot \theta$
$\cos 2\theta = \cos^2 \theta - \sin^2 \theta$	$\tan 2\theta = \frac{2 \tan \theta}{1 - \tan^2 \theta}$	$\tan \theta = \frac{\sin \theta}{\cos \theta}$
$\sin(\alpha \pm \beta) = \sin \alpha \cos \beta \pm \cos \alpha \sin \beta$	$\cos(\alpha \pm \beta) = \cos \alpha \cos \beta \mp \sin \alpha \sin \beta$	

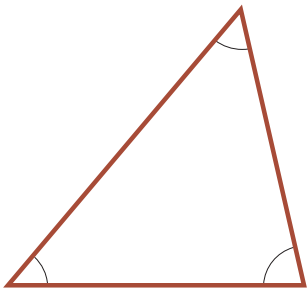


Figure B.11 An arbitrary, non-right triangle.

The following relationships are derived directly from the right triangle shown in Figure B.10:

$$\begin{aligned} \sin \theta &= \cos(90^\circ - \theta) \\ \cos \theta &= \sin(90^\circ - \theta) \\ \cot \theta &= \tan(90^\circ - \theta) \end{aligned}$$

Some properties of trigonometric functions are the following:

$$\begin{aligned} \sin(-\theta) &= -\sin \theta \\ \cos(-\theta) &= \cos \theta \\ \tan(-\theta) &= -\tan \theta \end{aligned}$$

The following relationships apply to *any* triangle as shown in Figure B.11:

$$\alpha + \beta + \gamma = 180$$

Law of cosines $a^2 = b^2 + c^2 - 2bc \cos \alpha$
 $b^2 = a^2 + c^2 - 2ac \cos \beta$
 $c^2 = a^2 + b^2 - 2ab \cos \gamma$

Law of sines $\frac{a}{\sin \alpha} = \frac{b}{\sin \beta} = \frac{c}{\sin \gamma}$

Table B.3 lists a number of useful trigonometric identities.

Example B.3

Consider the right triangle in Figure B.12 in which $a = 2.00$, $b = 5.00$, and c is unknown. From the Pythagorean theorem, we have

$$2.00^2 + 5.00^2 = c^2 \quad 4.00 + 25.0 = 29.0$$

$$c = \sqrt{29.0} \quad 5.39$$

To find the angle θ , note that

$$\tan \theta = \frac{2.00}{5.00} = 0.400$$



Figure B.12 (Example B.3)

B.3

Using a calculator, we find that

$$\theta = \arctan(0.400) \approx 21.8^\circ$$

where $\arctan(0.400)$ is the notation for “angle whose tangent is 0.400,” sometimes written as $\arctan(0.400)$.

Exercises

In Figure B.13, identify (a) the side opposite θ , (b) the side adjacent to θ , and then find (c) $\cos \theta$, (d) $\sin \theta$, and (e) $\tan \theta$.

Answers (a) 3 (b) 3 (c) $\frac{3}{5}$ (d) $\frac{3}{5}$ (e) $\frac{3}{5}$

2. In a certain right triangle, the two sides that are perpendicular to each other are 5.00 m and 7.00 m long. What is the length of the third side?

Answer 8.60 m

3. A right triangle has a hypotenuse of length 3.0 m, and one of its angles is 30° . (a) What is the length of the side opposite the 30° angle? (b) What is the side adjacent to the 30° angle?

Answers (a) 1.5 m (b) 2.6 m

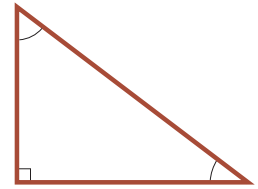


Figure B.13 (Exercise 1)

B.5 Series Expansions

$$\begin{aligned} \ln(1+x) &= x - \frac{x^2}{2} + \frac{x^3}{3} - \frac{x^4}{4} + \frac{x^5}{5} - \frac{x^6}{6} + \frac{x^7}{7} - \frac{x^8}{8} + \frac{x^9}{9} - \frac{x^{10}}{10} + \dots \\ \sin x &= x - \frac{x^3}{6} + \frac{x^5}{120} - \frac{x^7}{5040} + \frac{x^9}{362880} - \frac{x^{11}}{39916800} + \dots \\ \cos x &= 1 - \frac{x^2}{2} + \frac{x^4}{24} - \frac{x^6}{720} + \frac{x^8}{40320} - \frac{x^{10}}{362880} + \dots \\ \tan x &= x + \frac{x^3}{3} + \frac{2x^5}{15} + \frac{17x^7}{315} + \frac{62x^9}{2835} + \frac{1382x^{11}}{3465} + \dots \end{aligned}$$

For $|x| \ll 1$, the following approximations can be used:

$$\begin{aligned} \sin x &\approx x \\ \cos x &\approx 1 - \frac{x^2}{2} \\ \tan x &\approx x \end{aligned}$$

B.6 Differential Calculus

In various branches of science, it is sometimes necessary to use the basic tools of calculus, invented by Newton, to describe physical phenomena. The use of calculus is fundamental in the treatment of various problems in Newtonian mechanics, electricity, and magnetism. In this section, we simply state some basic properties and “rules of thumb” that should be a useful review to the student.

The approximations for the functions $\sin x$, $\cos x$, and $\tan x$ are for $|x| \ll 1$ rad.

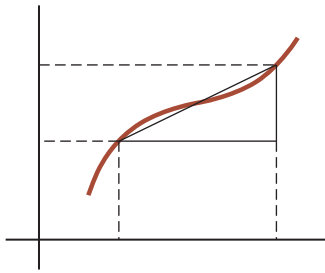


Figure B.14 The lengths Δx and Δy are used to define the derivative of this function at a point.

First, a **function** must be specified that relates one variable to another (e.g., a coordinate as a function of time). Suppose one of the variables is called y (the dependent variable), and the other x (the independent variable). We might have a function relationship such as

$$y = ax^2 + bx + c$$

If a , b , and c are specified constants, y can be calculated for any value of x . We usually deal with continuous functions, that is, those for which y varies “smoothly” with x .

The **derivative** of y with respect to x is defined as the limit as Δx approaches zero of the slopes of chords drawn between two points on the y versus x curve. Mathematically, we write this definition as

$$\frac{dy}{dx} = \lim_{\Delta x \rightarrow 0} \frac{\Delta y}{\Delta x} = \lim_{\Delta x \rightarrow 0} \frac{y_2 - y_1}{x_2 - x_1} \quad (\text{B.28})$$

where Δy and Δx are defined as $\Delta y = y_2 - y_1$ and $\Delta x = x_2 - x_1$ (Fig. B.14). Note that $\frac{dy}{dx}$ does not mean y divided by x , but rather is simply a notation of the limiting process of the derivative as defined by Equation B.28.

A useful expression to remember when $\frac{dy}{dx} = nax$, where a is a constant and n is any positive or negative number (integer or fraction), is

$$\frac{d}{dx} (ax^n) = nax^{n-1} \quad (\text{B.29})$$

Table B.4 Derivative for Several Functions

$\frac{d}{dx} ax^n$	nax^{n-1}
$\frac{d}{dx} ae^{ax}$	$a e^{ax}$
$\frac{d}{dx} \sin ax$	$\cos ax$
$\frac{d}{dx} \cos ax$	$-\sin ax$
$\frac{d}{dx} \tan ax$	$\sec^2 ax$
$\frac{d}{dx} \cot ax$	$-\csc^2 ax$
$\frac{d}{dx} \sec ax$	$\tan ax \sec ax$
$\frac{d}{dx} \csc ax$	$-\cot ax \csc ax$
$\frac{d}{dx} \ln ax$	$\frac{1}{ax}$
$\frac{d}{dx} \sin ax$	$\cos ax$
$\frac{d}{dx} \cos ax$	$-\sin ax$
$\frac{d}{dx} \tan ax$	$\sec^2 ax$

Note: The symbols a and n represent constants.

If y is a polynomial or algebraic function of x , we apply Equation B.29 to each term in the polynomial and take $\frac{d}{dx} [\text{constant}] = 0$. In Examples B.4 through B.7, we evaluate the derivatives of several functions.

Special Properties of the Derivative

A. Derivative of the product of two functions If a function $h(x)$ is given by the product of two functions—say, $h(x) = g(x)f(x)$ —the derivative of $h(x)$ is defined as

$$\frac{d}{dx} (g(x)f(x)) = g(x) \frac{df}{dx} + f(x) \frac{dg}{dx} \quad (\text{B.30})$$

B. Derivative of the sum of two functions If a function $h(x)$ is equal to the sum of two functions, the derivative of the sum is equal to the sum of the derivatives:

$$\frac{d}{dx} (g(x) + f(x)) = \frac{dg}{dx} + \frac{df}{dx} \quad (\text{B.31})$$

C. Chain rule of differential calculus If $y = g(x)$ and $x = f(z)$, then y can be written as the product of two derivatives:

$$\frac{dy}{dz} = \frac{dy}{dx} \frac{dx}{dz} \quad (\text{B.32})$$

D. The second derivative The second derivative of y with respect to x is defined as the derivative of the function $\frac{dy}{dx}$ (the derivative of the derivative). It is usually written as

$$\frac{d^2y}{dx^2} = \frac{d}{dx} \left(\frac{dy}{dx} \right) \quad (\text{B.33})$$

Some of the more commonly used derivatives of functions are listed in Table B.4.

Example B.4

Suppose $y(x)$ (that is, y as a function of x) is given by

$$y(x) = ax^3 + bx + c$$

where a and b are constants. It follows that

$$\begin{aligned} y(x + \Delta x) &= a(x + \Delta x)^3 + b(x + \Delta x) + c \\ &= a(x^3 + 3x^2 \Delta x + 3x \Delta x^2 + \Delta x^3) + b(x + \Delta x) + c \end{aligned}$$

so

$$\Delta y = y(x + \Delta x) - y(x) = a(3x^2 \Delta x + 3x \Delta x^2 + \Delta x^3) + b \Delta x$$

Substituting this into Equation B.28 gives

$$\frac{dy}{dx} = \lim_{\Delta x \rightarrow 0} \frac{\Delta y}{\Delta x} = \lim_{\Delta x \rightarrow 0} [3ax^2 + 3ax \Delta x + a \Delta x^2] + b$$

$$\frac{dy}{dx} = 3ax^2 + b$$

Example B.5

Find the derivative of

$$y(x) = 8x^5 + 4x^3 + 2x + 7$$

SOLUTION

Applying Equation B.29 to each term independently and remembering that d/dx (constant) = 0, we have

$$\frac{dy}{dx} = 8(5)x^4 + 4(3)x^2 + 2(1)x^0 + 0$$

$$\frac{dy}{dx} = 40x^4 + 12x^2 + 2$$

Example B.6

Find the derivative of $y(x) = x^3/(x + 1)^2$ with respect to x .

SOLUTION

We can rewrite this function as $y(x) = x^3(x + 1)^{-2}$ and apply Equation B.30:

$$\begin{aligned} \frac{dy}{dx} &= (x + 1)^{-2} \frac{d}{dx} (x^3) + x^3 \frac{d}{dx} (x + 1)^{-2} \\ &= (x + 1)^{-2} 3x^2 + x^3 (-2)(x + 1)^{-3} \end{aligned}$$

$$\frac{dy}{dx} = \frac{3x^2}{(x + 1)^2} - \frac{2x^3}{(x + 1)^3} = \frac{x^2(x + 3)}{(x + 1)^3}$$

Example B.7

A useful formula that follows from Equation B.30 is the derivative of the quotient of two functions. Show that

$$\frac{d}{dx} \left[\frac{g(x)}{h(x)} \right] = \frac{h \frac{dg}{dx} - g \frac{dh}{dx}}{h^2}$$

SOLUTION

We can write the quotient as gh^{-1} and then apply Equations B.29 and B.30:

$$\begin{aligned} \frac{d}{dx} \left(\frac{g}{h} \right) &= \frac{d}{dx} (gh^{-1}) = g \frac{d}{dx} (h^{-1}) + h^{-1} \frac{d}{dx} (g) \\ &= -gh^{-2} \frac{dh}{dx} + h^{-1} \frac{dg}{dx} \\ &= \frac{h \frac{dg}{dx} - g \frac{dh}{dx}}{h^2} \end{aligned}$$

B.7 Integral Calculus

We think of integration as the inverse of differentiation. As an example, consider the expression

$$f(x) = \frac{dy}{dx} = 3ax^2 + b \quad (\text{B.34})$$

which was the result of differentiating the function

$$y(x) = ax^3 + bx + c$$

in Example B.4. We can write Equation B.34 as $dy = f(x) dx = (3ax^2 + b) dx$ and obtain $y(x)$ by “summing” over all values of x . Mathematically, we write this inverse operation as

$$y(x) = \int f(x) dx$$

For the function $f(x)$ given by Equation B.34, we have

$$y(x) = \int (3ax^2 + b) dx = ax^3 + bx + c$$

where c is a constant of the integration. This type of integral is called an *indefinite integral* because its value depends on the choice of c .

A general **indefinite integral** $I(x)$ is defined as

$$I(x) = \int f(x) dx \quad (\text{B.35})$$

where $f(x)$ is called the *integrand* and $f(x) = dI(x)/dx$.

For a *general continuous* function $f(x)$, the integral can be interpreted geometrically as the area under the curve bounded by $f(x)$ and the x axis, between two specified values of x , say, x_1 and x_2 , as in Figure B.15.

The area of the blue element in Figure B.15 is approximately $f(x_i) \Delta x_i$. If we sum all these area elements between x_1 and x_2 and take the limit of this sum as $\Delta x_i \rightarrow 0$,

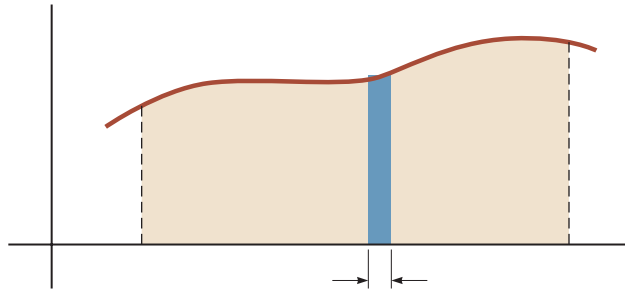


Figure B.15 The definite integral of a function is the area under the curve of the function between the limits and

we obtain the *true* area under the curve bounded by () and the axis, between the limits and

$$\text{Area} = \lim_{n \rightarrow \infty} \sum_{i=1}^n f(x_i) \Delta x \quad (\text{B.36})$$

Integrals of the type defined by Equation B.36 are called **definite integrals**.

One common integral that arises in practical situations has the form

$$\int_a^b f(x) dx \quad (\text{B.37})$$

This result is obvious, being that differentiation of the right-hand side with respect to gives $\frac{d}{dx} \int_a^b f(x) dx = f(x)$ directly. If the limits of the integration are known, this integral becomes a *definite integral* and is written

$$\int_a^b f(x) dx \quad (\text{B.38})$$

Examples

1. $\int_a^b f(x) dx$
2. $\int_a^b f(x) dx$
3. $\int_a^b f(x) dx$

Partial Integration

Sometimes it is useful to apply the method of *partial integration* (also called “integrating by parts”) to evaluate certain integrals. This method uses the property

$$d(uv) = u dv + v du \quad (\text{B.39})$$

where u and v are *carefully* chosen so as to reduce a complex integral to a simpler one. In many cases, several reductions have to be made. Consider the function

$$dx$$

which can be evaluated by integrating by parts twice. First, if we choose $u = x$ and $dv = dx$, we obtain

$$\int x dx = \frac{x^2}{2} + C$$

Now, in the second term, choose $u = x$, $v = e^x$, which gives

$$\int x^2 e^x dx = x^2 e^x - 2x e^x + 2 \int e^x dx + c_1$$

or

$$\int x^2 e^x dx = x^2 e^x - 2xe^x + 2e^x + c_2$$

The Perfect Differential

Another useful method to remember is that of the *perfect differential*, in which we look for a change of variable such that the differential of the function is the differential of the independent variable appearing in the integrand. For example, consider the integral

$$I(x) = \int \cos^2 x \sin x dx$$

This integral becomes easy to evaluate if we rewrite the differential as $d(\cos x) = -\sin x dx$. The integral then becomes

$$\int \cos^2 x \sin x dx = - \int \cos^2 x d(\cos x)$$

If we now change variables, letting $y = \cos x$, we obtain

$$\int \cos^2 x \sin x dx = - \int y^2 dy = -\frac{y^3}{3} + c = -\frac{\cos^3 x}{3} + c$$

Table B.5 lists some useful indefinite integrals. Table B.6 gives Gauss's probability integral and other definite integrals. A more complete list can be found in various handbooks, such as *The Handbook of Chemistry and Physics* (Boca Raton, FL: CRC Press, published annually).

Table B.5 Some Indefinite Integrals (An arbitrary constant should be added to each of these integrals.)

$$\int x^n dx = \frac{x^{n+1}}{n+1} \text{ (provided } n \neq -1)$$

$$\int \ln ax dx = (x \ln ax) - x$$

$$\int \frac{dx}{x} = \int x^{-1} dx = \ln x$$

$$\int xe^{ax} dx = \frac{e^{ax}}{a^2} (ax - 1)$$

$$\int \frac{dx}{a+bx} = \frac{1}{b} \ln(a+bx)$$

$$\int \frac{dx}{a+be^{cx}} = \frac{x}{a} - \frac{1}{ac} \ln(a+be^{cx})$$

$$\int \frac{x dx}{a+bx} = \frac{x}{b} - \frac{a}{b^2} \ln(a+bx)$$

$$\int \sin ax dx = -\frac{1}{a} \cos ax$$

$$\int \frac{dx}{x(x+a)} = -\frac{1}{a} \ln \frac{x+a}{x}$$

$$\int \cos ax dx = \frac{1}{a} \sin ax$$

$$\int \frac{dx}{(a+bx)^2} = -\frac{1}{b(a+bx)}$$

$$\int \tan ax dx = -\frac{1}{a} \ln(\cos ax) = \frac{1}{a} \ln(\sec ax)$$

$$\int \frac{dx}{a^2+x^2} = \frac{1}{a} \tan^{-1} \frac{x}{a}$$

$$\int \cot ax dx = \frac{1}{a} \ln(\sin ax)$$

$$\int \frac{dx}{a^2-x^2} = \frac{1}{2a} \ln \frac{a+x}{a-x} \text{ (} a^2-x^2 > 0)$$

$$\int \sec ax dx = \frac{1}{a} \ln(\sec ax + \tan ax) = \frac{1}{a} \ln \left[\tan \left(\frac{ax}{2} + \frac{\pi}{4} \right) \right]$$

$$\int \frac{dx}{x^2-a^2} = \frac{1}{2a} \ln \frac{x-a}{x+a} \text{ (} x^2-a^2 > 0)$$

$$\int \csc ax dx = \frac{1}{a} \ln(\csc ax - \cot ax) = \frac{1}{a} \ln \left(\tan \frac{ax}{2} \right)$$

(Continued)

Table B.5 Some Indefinite Integrals (*continued*)

$\int \frac{x dx}{a^2 \pm x^2} = \pm \frac{1}{2} \ln(a^2 \pm x^2)$	$\int \sin^2 ax dx = \frac{x}{2} - \frac{\sin 2ax}{4a}$
$\int \frac{dx}{\sqrt{a^2 - x^2}} = \sin^{-1} \frac{x}{a} = -\cos^{-1} \frac{x}{a} \quad (a^2 - x^2 > 0)$	$\int \cos^2 ax dx = \frac{x}{2} + \frac{\sin 2ax}{4a}$
$\int \frac{dx}{\sqrt{x^2 \pm a^2}} = \ln(x + \sqrt{x^2 \pm a^2})$	$\int \frac{dx}{\sin^2 ax} = -\frac{1}{a} \cot ax$
$\int \frac{x dx}{\sqrt{a^2 - x^2}} = -\sqrt{a^2 - x^2}$	$\int \frac{dx}{\cos^2 ax} = \frac{1}{a} \tan ax$
$\int \frac{x dx}{\sqrt{x^2 \pm a^2}} = \sqrt{x^2 \pm a^2}$	$\int \tan^2 ax dx = \frac{1}{a} (\tan ax) - x$
$\int \sqrt{a^2 - x^2} dx = \frac{1}{2} \left(x\sqrt{a^2 - x^2} + a^2 \sin^{-1} \frac{x}{ a } \right)$	$\int \cot^2 ax dx = -\frac{1}{a} (\cot ax) - x$
$\int x\sqrt{a^2 - x^2} dx = -\frac{1}{3} (a^2 - x^2)^{3/2}$	$\int \sin^{-1} ax dx = x(\sin^{-1} ax) + \frac{\sqrt{1 - a^2 x^2}}{a}$
$\int \sqrt{x^2 \pm a^2} dx = \frac{1}{2} x\sqrt{x^2 \pm a^2} \pm a^2 \ln(x + \sqrt{x^2 \pm a^2})$	$\int \cos^{-1} ax dx = x(\cos^{-1} ax) - \frac{\sqrt{1 - a^2 x^2}}{a}$
$\int x(\sqrt{x^2 \pm a^2}) dx = \frac{1}{3} (x^2 \pm a^2)^{3/2}$	$\int \frac{dx}{(x^2 + a^2)^{3/2}} = \frac{x}{a^2 \sqrt{x^2 + a^2}}$
$\int e^{ax} dx = \frac{1}{a} e^{ax}$	$\int \frac{x dx}{(x^2 + a^2)^{3/2}} = -\frac{1}{\sqrt{x^2 + a^2}}$

Table B.6 Gauss's Probability Integral and Other Definite Integrals

$\int_0^\infty x^n e^{-ax} dx = \frac{n!}{a^{n+1}}$
$I_0 = \int_0^\infty e^{-ax^2} dx = \frac{1}{2} \sqrt{\frac{\pi}{a}} \quad (\text{Gauss's probability integral})$
$I_1 = \int_0^\infty x e^{-ax^2} dx = \frac{1}{2a}$
$I_2 = \int_0^\infty x^2 e^{-ax^2} dx = -\frac{dI_0}{da} = \frac{1}{4} \sqrt{\frac{\pi}{a^3}}$
$I_3 = \int_0^\infty x^3 e^{-ax^2} dx = -\frac{dI_1}{da} = \frac{1}{2a^2}$
$I_4 = \int_0^\infty x^4 e^{-ax^2} dx = \frac{d^2 I_0}{da^2} = \frac{3}{8} \sqrt{\frac{\pi}{a^5}}$
$I_5 = \int_0^\infty x^5 e^{-ax^2} dx = \frac{d^2 I_1}{da^2} = \frac{1}{a^3}$
\vdots
$I_{2n} = (-1)^n \frac{d^n}{da^n} I_0$
$I_{2n+1} = (-1)^n \frac{d^n}{da^n} I_1$

B.8 Propagation of Uncertainty

In laboratory experiments, a common activity is to take measurements that act as raw data. These measurements are of several types—length, time interval, temperature, voltage, and so on—and are taken by a variety of instruments. Regardless of the measurement and the quality of the instrumentation, **there is always uncertainty associated with a physical measurement.** This uncertainty is a combination of that associated with the instrument and that related to the system being measured. An example of the former is the inability to exactly determine the position of a length measurement between the lines on a meterstick. An example of uncertainty related to the system being measured is the variation of temperature within a sample of water so that a single temperature for the sample is difficult to determine.

Uncertainties can be expressed in two ways. **Absolute uncertainty** refers to an uncertainty expressed in the same units as the measurement. Therefore, the length of a computer disk label might be expressed as (5.5 ± 0.1) cm. The uncertainty of ± 0.1 cm by itself is not descriptive enough for some purposes, however. This uncertainty is large if the measurement is 1.0 cm, but it is small if the measurement is 100 m. To give a more descriptive account of the uncertainty, **fractional uncertainty** or **percent uncertainty** is used. In this type of description, the uncertainty is divided by the actual measurement. Therefore, the length of the computer disk label could be expressed as

$$\ell = 5.5 \text{ cm} \pm \frac{0.1 \text{ cm}}{5.5 \text{ cm}} = 5.5 \text{ cm} \pm 0.018 \quad (\text{fractional uncertainty})$$

or as

$$\ell = 5.5 \text{ cm} \pm 1.8\% \quad (\text{percent uncertainty})$$

When combining measurements in a calculation, the percent uncertainty in the final result is generally larger than the uncertainty in the individual measurements. This is called **propagation of uncertainty** and is one of the challenges of experimental physics.

Some simple rules can provide a reasonable estimate of the uncertainty in a calculated result:

Multiplication and division: When measurements with uncertainties are multiplied or divided, add the *percent uncertainties* to obtain the percent uncertainty in the result.

Example: The Area of a Rectangular Plate

$$\begin{aligned} A = \ell w &= (5.5 \text{ cm} \pm 1.8\%) \times (6.4 \text{ cm} \pm 1.6\%) = 35 \text{ cm}^2 \pm 3.4\% \\ &= (35 \pm 1) \text{ cm}^2 \end{aligned}$$

Addition and subtraction: When measurements with uncertainties are added or subtracted, add the *absolute uncertainties* to obtain the absolute uncertainty in the result.

Example: A Change in Temperature

$$\begin{aligned} \Delta T = T_2 - T_1 &= (99.2 \pm 1.5)^\circ\text{C} - (27.6 \pm 1.5)^\circ\text{C} = (71.6 \pm 3.0)^\circ\text{C} \\ &= 71.6^\circ\text{C} \pm 4.2\% \end{aligned}$$

Powers: If a measurement is taken to a power, the percent uncertainty is multiplied by that power to obtain the percent uncertainty in the result.

Example: The Volume of a Sphere

$$\begin{aligned} V &= \frac{4}{3}\pi r^3 = \frac{4}{3}\pi(6.20 \text{ cm} \pm 2.0\%)^3 = 998 \text{ cm}^3 \pm 6.0\% \\ &= (998 \pm 60) \text{ cm}^3 \end{aligned}$$

For complicated calculations, many uncertainties are added together, which can cause the uncertainty in the final result to be undesirably large. Experiments should be designed such that calculations are as simple as possible.

Notice that uncertainties in a calculation always add. As a result, an experiment involving a subtraction should be avoided if possible, especially if the measurements being subtracted are close together. The result of such a calculation is a small difference in the measurements and uncertainties that add together. It is possible that the uncertainty in the result could be larger than the result itself!

C

Periodic Table of the Elements

Group I	Group II	Transition elements								
H 1 1.007 9 1s										
Li 3 6.941 2s ¹	Be 4 9.0122 2s ²									
Na 11 22.990 3s ¹	Mg 12 24.305 3s ²									
K 19 39.098 4s ¹	Ca 20 40.078 4s ²	Sc 21 44.956 3d ¹ 4s ²	Ti 22 47.867 3d ² 4s ²	V 23 50.942 3d ³ 4s ²	Cr 24 51.996 3d ⁵ 4s ¹	Mn 25 54.938 3d ⁵ 4s ²	Fe 26 55.845 3d ⁶ 4s ²	Co 27 58.933 3d ⁷ 4s ²		
Rb 37 85.468 5s ¹	Sr 38 87.62 5s ²	Y 39 88.906 4d ¹ 5s ²	Zr 40 91.224 4d ² 5s ²	Nb 41 92.906 4d ⁴ 5s ¹	Mo 42 95.94 4d ⁵ 5s ¹	Tc 43 (98) 4d ⁵ 5s ²	Ru 44 101.07 4d ⁷ 5s ¹	Rh 45 102.91 4d ⁸ 5s ¹		
Cs 55 132.91 6s ¹	Ba 56 137.33 6s ²	57–71*	Hf 72 178.49 5d ² 6s ²	Ta 73 180.95 5d ³ 6s ²	W 74 183.84 5d ⁴ 6s ²	Re 75 186.21 5d ⁵ 6s ²	Os 76 190.23 5d ⁶ 6s ²	Ir 77 192.2 5d ⁷ 6s ²		
Fr 87 (223) 7s ¹	Ra 88 (226) 7s ²	89–103**	Rf 104 (261) 6d ² 7s ²	Db 105 (262) 6d ³ 7s ²	Sg 106 (266)	Bh 107 (264)	Hs 108 (277)	Mt 109 (268)		

Symbol — **Ca** 20 — Atomic number
 Atomic mass[†] — 40.078
 Electron configuration — 4s²

*Lanthanide series

La 57 138.91 5d ¹ 6s ²	Ce 58 140.12 5d ¹ 4f ¹ 6s ²	Pr 59 140.91 4f ³ 6s ²	Nd 60 144.24 4f ⁴ 6s ²	Pm 61 (145) 4f ⁵ 6s ²	Sm 62 150.36 4f ⁶ 6s ²
---	---	---	---	--	---

**Actinide series

Ac 89 (227) 6d ¹ 7s ²	Th 90 232.04 6d ² 7s ²	Pa 91 231.04 5f ² 6d ¹ 7s ²	U 92 238.03 5f ³ 6d ¹ 7s ²	Np 93 (237) 5f ⁴ 6d ¹ 7s ²	Pu 94 (244) 5f ⁶ 7s ²
--	---	---	--	--	--

Note: Atomic mass values given are averaged over isotopes in the percentages in which they exist in nature.

[†]For an unstable element, mass number of the most stable known isotope is given in parentheses.

			Group III	Group IV	Group V	Group VI	Group VII	Group 0
							H 1 1.007 9 1s ¹	He 2 4.002 6 1s ²
			B 5 10.811 2p ¹	C 6 12.011 2p ²	N 7 14.007 2p ³	O 8 15.999 2p ⁴	F 9 18.998 2p ⁵	Ne 10 20.180 2p ⁶
			Al 13 26.982 3p ¹	Si 14 28.086 3p ²	P 15 30.974 3p ³	S 16 32.066 3p ⁴	Cl 17 35.453 3p ⁵	Ar 18 39.948 3p ⁶
Ni 28 58.693 3d ⁸ 4s ²	Cu 29 63.546 3d ¹⁰ 4s ¹	Zn 30 65.41 3d ¹⁰ 4s ²	Ga 31 69.723 4p ¹	Ge 32 72.64 4p ²	As 33 74.922 4p ³	Se 34 78.96 4p ⁴	Br 35 79.904 4p ⁵	Kr 36 83.80 4p ⁶
Pd 46 106.42 4d ¹⁰	Ag 47 107.87 4d ¹⁰ 5s ¹	Cd 48 112.41 4d ¹⁰ 5s ²	In 49 114.82 5p ¹	Sn 50 118.71 5p ²	Sb 51 121.76 5p ³	Te 52 127.60 5p ⁴	I 53 126.90 5p ⁵	Xe 54 131.29 5p ⁶
Pt 78 195.08 5d ⁹ 6s ¹	Au 79 196.97 5d ¹⁰ 6s ¹	Hg 80 200.59 5d ¹⁰ 6s ²	Tl 81 204.38 6p ¹	Pb 82 207.2 6p ²	Bi 83 208.98 6p ³	Po 84 (209) 6p ⁴	At 85 (210) 6p ⁵	Rn 86 (222) 6p ⁶
Ds 110 (271)	Rg 111 (272)	Cn 112 (285)	113 ^{††} (284)	Fl 114 (289)	115 ^{††} (288)	Lv 116 (293)	117 ^{††} (294)	118 ^{††} (294)

Eu 63 151.96 4f ⁷ 6s ²	Gd 64 157.25 4f ⁷ 5d ¹ 6s ²	Tb 65 158.93 4f ⁸ 5d ¹ 6s ²	Dy 66 162.50 4f ¹⁰ 6s ²	Ho 67 164.93 4f ¹¹ 6s ²	Er 68 167.26 4f ¹² 6s ²	Tm 69 168.93 4f ¹³ 6s ²	Yb 70 173.04 4f ¹⁴ 6s ²	Lu 71 174.97 4f ¹⁴ 5d ¹ 6s ²
Am 95 (243) 5f ⁷ 7s ²	Cm 96 (247) 5f ⁷ 6d ¹ 7s ²	Bk 97 (247) 5f ⁸ 6d ¹ 7s ²	Cf 98 (251) 5f ¹⁰ 7s ²	Es 99 (252) 5f ¹¹ 7s ²	Fm 100 (257) 5f ¹² 7s ²	Md 101 (258) 5f ¹³ 7s ²	No 102 (259) 5f ¹⁴ 7s ²	Lr 103 (262) 5f ¹⁴ 6d ¹ 7s ²

^{††} Elements 113, 115, 117, and 118 have not yet been officially named. Only small numbers of atoms of these elements have been observed.
 Note: For a description of the atomic data, visit physics.nist.gov/PhysRefData/Elements/per_text.html.

Table D.1 SI Units

Base Quantity	SI Base Unit	
	Name	Symbol
Length	meter	m
Mass	kilogram	kg
Time	second	s
Electric current	ampere	A
Temperature	kelvin	K
Amount of substance	mole	mol
Luminous intensity	candela	cd

Table D.2 Some Derived SI Units

Other Quantity	Name	Symbol	Expression in Terms of Base Units	Expression in Terms of SI Units
Plane angle	radian	rad	m/m	
Frequency	hertz	Hz	s ⁻¹	
Force	newton	N	kg · m/s ²	J/m
Pressure	pascal	Pa	kg/m · s ²	N/m ²
Energy	joule	J	kg · m ² /s ²	N · m
Power	watt	W	kg · m ² /s ³	J/s
Electric charge	coulomb	C	A · s	
Electric potential	volt	V	kg · m ² /A · s ³	W/A
Capacitance	farad	F	A ² · s ⁴ /kg · m ²	C/V
Electric resistance	ohm	Ω	kg · m ² /A ² · s ³	V/A
Magnetic flux	weber	Wb	kg · m ² /A · s ²	V · s
Magnetic field	tesla	T	kg/A · s ²	
Inductance	henry	H	kg · m ² /A ² · s ²	T · m ² /A

Answers to Quick Quizzes and Odd-Numbered Problems

Chapter 1

Answers to Quick Quizzes

- (a)
 2. False
 3. (b)

Answers to Odd-Numbered Problems

- (a) 5.52 kg/m (b) It is between the density of aluminum and that of iron and is greater than the densities of typical surface rocks.
 3. 23.0 kg
 5. 7.69 cm
 0.141 nm
 9. (b) only
 11. (a) kg m/s (b) N · s
 13. No.
 15. 11.4 kg/m
 17. 871 m
 19. By measuring the pages, we find that each page has area 0.277 m × 0.217 m = 0.060 m². The room has wall area 37 m², requiring 616 sheets that would be counted as 232 pages. Volume 1 of this textbook contains only 784 pages.
 21. 1.00
 23. 4.05
 25. 2.86 cm
 27. 151
 29. (a) 507 years (b) 2.48 bills
 31. balls in a room 4 m by 4 m by 3 m
 33. piano tuners
 35. (209 ± 4) cm
 37. 31 556 926.0 s
 39.
 41. 8.80%
 43.
 45. (a) 6.71 m (b) 0.894 (c) 0.745
 47. 48.6 kg
 49. 3.46
 51. Answers may vary somewhat due to variation in reading precise numbers off the graph. (a) 0.015 g (b) 8% (c) 5.2 g/m² (d) For shapes cut from this copy paper, the mass of the cutout is proportional to its area. The proportionality constant is 5.2 g/m² ± 8%, where the uncertainty is estimated. (e) This result is to be expected if the paper has thickness and density that are uniform within

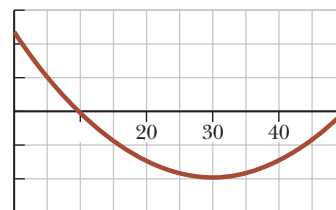
the experimental uncertainty. (f) The slope is the areal density of the paper, its mass per unit area.

53. 5.2 m, 3%
 55. 316 m
 57. 5.0 m
 59. 3.41 m
 61. (a) aluminum, 2.75 g/cm³; copper, 9.36 g/cm³; brass, 8.91 g/cm³; tin, 7.68 g/cm³; iron, 7.88 g/cm³
 (b) The tabulated values are smaller by 2% for aluminum, by 5% for copper, by 6% for brass, by 5% for tin, and by 0.3% for iron.
 63. gal/yr
 65. Answers may vary. (a) prokaryotes (b)
 67. (a) 2.70 g/cm³ 1.19 g/cm³ (b) 1.39 kg
 69. 0.579 (1.19), where is in cubic feet and is in seconds
 71. (a) 0.529 cm/s (b) 11.5 cm/s
 73. (a) 12.1 m (b) 135° (c) 25.2° (d) 135°

Chapter 2

Answers to Quick Quizzes

- (c)
 2. (b)
 3. False. Your graph should look something like the one shown below. This graph shows that the maximum speed is about 5.0 m/s, which is 18 km/h (11 mi/h), so the driver was not speeding.

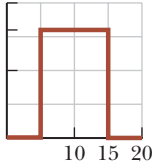


4. (b)
 5. (c)
 6. (a)–(e), (b)–(d), (c)–(f)
 (i) (e) (ii) (d)

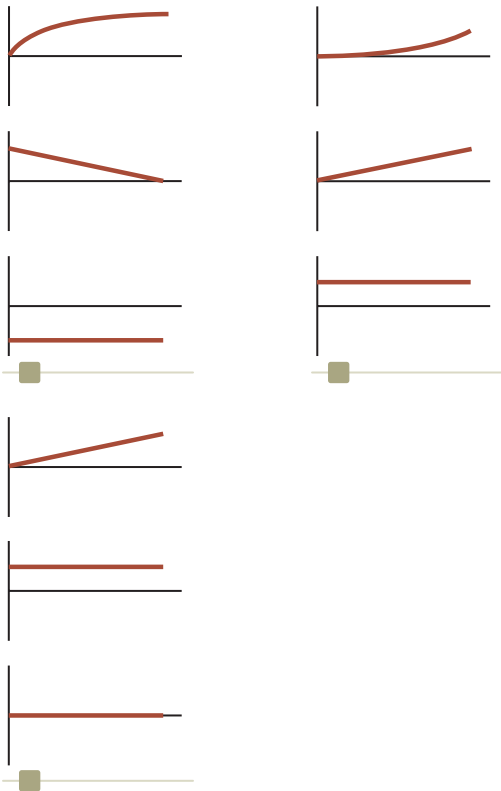
Answers to Odd-Numbered Problems

- (a) 5 m/s (b) 1.2 m/s (c) 2.5 m/s (d) 3.3 m/s (e) 0
 3. (a) 3.75 m/s (b) 0

5. (a) 2.30 m/s (b) 16.1 m/s (c) 11.5 m/s
 (a) 2.4 m/s (b) 3.8 m/s (c) 4.0 s
 9. (a) 5.0 m/s (b) 2.5 m/s (c) 0 (d) 5.0 m/s
 11. (a) 5.00 m (b) 4.88
 13. (a) 2.80 h (b) 218 km
 15. (a)



- (b) 1.60 m/s (c) 0.800 m/s
 17. (a) 1.3 m/s (b) 3 s, 2 m/s (c) 6 s, 10 s
 (d) 1.5 m/s
 19. (a) 20 m/s, 5 m/s (b) 263 m
 21. (a) 2.00 m (b) 3.00 m/s (c) 2.00 m/s
 23.



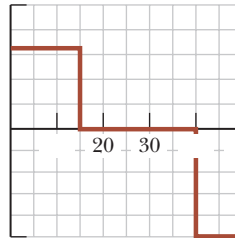
25. (a) 4.98 s (b) 1.20 m/s
 27. (a) 9.00 m/s (b) 3.00 m/s (c) 17.0 m/s (d) The graph of velocity versus time is a straight line passing through 13 m/s at 10:05 a.m. and sloping downward, decreasing by 4 m/s for each second thereafter. (e) If and only if we know the object's velocity at one instant of time, knowing its acceleration tells us its velocity at every other moment as long as the acceleration is constant.
 29. 16.0 cm/s
 31. (a) 202 m/s (b) 198 m
 33. (a) 35.0 s (b) 15.7 m/s
 35. 3.10 m/s
 37. (a)



- (b) Particle under constant acceleration
 (c) (Equation 2.17)

- (d) (e) 1.25 m/s (f) 8.00 s
 39. (a) The idea is false unless the acceleration is zero. We define constant acceleration to mean that the velocity is changing steadily in time. So, the velocity cannot be changing steadily in space.
 (b) This idea is true. Because the velocity is changing steadily in time, the velocity halfway through an interval is equal to the average of its initial and final values.
 41. (a) 13.5 m (b) 13.5 m (c) 13.5 m (d) 22.5 m
 43. (a) 1.88 km (b) 1.46 km

(c)



- (d) 0 1.67 ab 50 375; 250 2.5 375 (In all three expressions, is in meters and is in seconds.) (e) 37.5 m/s
 45. (a) 0.231 m (b) 0.364 m (c) 0.399 m (d) 0.175 m
 47. David will be unsuccessful. The average human reaction time is about 0.2 s (research on the Internet) and a dollar bill is about 15.5 cm long, so David's fingers are about 8 cm from the end of the bill before it is dropped. The bill will fall about 20 cm before he can close his fingers.
 49. (a) 510 m (b) 20.4 s
 51. 1.79 s
 53. (a) 10.0 m/s up (b) 4.68 m/s down
 55. (a) 7.82 m (b) 0.782 s
 57. (a)
 59. (a) (10.0 3.00 (1.67 (1.50 (In these expressions, is in m/s is in meters, and is in seconds.) (b) 3.00 ms (c) 450 m/s (d) 0.900 m
 61. (a) 4.00 m/s (b) 1.00 ms (c) 0.816 m
 63. (a) 3.00 s (b) 15.3 m/s (c) 31.4 m/s down and 34.8 m/s down
 65. (a) 3.00 m/s (b) 6.00 s (c) -0.300 m/s (d) 2.05 m/s
 67. (a) 2.83 s (b) It is exactly the same situation as in Example 2.8 except that this problem is in the vertical direction. The descending elevator plays the role of the speeding car, and the falling bolt plays the role of the accelerating trooper. Turn Figure 2.13 through 90° clockwise to visualize the elevator-bolt problem! (c) If each floor is 3 m high, the highest floor that can be reached is the 13th floor.
 69. (a) From the graph, we see that the Acela is cruising at a constant positive velocity in the positive direction from about 50 s to 50 s. From 50 s to 200 s, the Acela accelerates in the positive direction reaching a top speed of about 170 mi/h. Around 200 s, the engineer applies the brakes, and the train, still traveling in the positive direction, slows down and then stops at 350 s. Just after

- 350 s, the train reverses direction (becomes negative) and steadily gains speed in the negative direction.
 (b) approximately 2.2 mi/h/s (c) approximately 6.7 mi
71. (a) Here, must be greater than and the distance between the leading athlete and the finish line must be great enough so that the trailing athlete has time to catch up.
 (b) _____ (c) _____
73. (a) 5.46 s (b) 73.0 m
 (c) Stan 22.6 m/s, Kathy 26.7 m/s
75. (a) $(1/\tan \theta)$ (b) The velocity starts off larger than for small values of θ and then decreases, approaching zero as θ approaches 90° .
77. (a) 15.0 s (b) 30.0 m/s (c) 225 m
79. 1.60 m/s
81. (a) 35.9 m (b) 4.04 s (c) 45.8 m (d) 22.6 m/s
83. (a) 5.32 m/s for Laura and 3.75 m/s for Healan
 (b) 10.6 m/s for Laura and 11.2 m/s for Healan
 (c) Laura, by 2.63 m (d) 4.47 m at 2.84 s
85. (a) 26.4 m (b) 6.8%

Chapter 3

Answers to Quick Quizzes

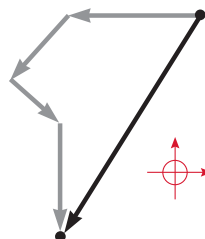
vectors: (b), (c); scalars: (a), (d), (e)

2. (c)
3. (b) and (c)
4. (b)
5. (c)

Answers to Odd-Numbered Problems

- 2.75, 4.76) m
3. (a) 8.60 m (b) 4.47 m, 63.4° ; 4.24 m, 135°
5. (a) (3.56 cm, 2.40 cm) (b) (4.30 cm, 326°)
 (c) (8.60 cm, 34.0°) (d) (12.9 cm, 146°)
 70.0 m
9. This situation can *never* be true because the distance is the length of an arc of a circle between two points, whereas the magnitude of the displacement vector is a straight-line chord of the circle between the same points.
11. (a) 5.2 m at 60° (b) 3.0 m at 330° (c) 3.0 m at 150°
 (d) 5.2 m at 300°
13. approximately 420 ft at
15. 47.2 units at 122°
17. (a) yes (b) The speed of the camper should be 28.3 m/s or more to satisfy this requirement.
19. (a) (11.1 6.40) m (b) (1.65 2.86) cm
 (c) (18.0 12.6) in.
21. 358 m at 2.00° S of E
23. (a) 2.00 6.00 (b) 4.00 2.00 (c) 6.32 (d) 4.47
 (e) 288° ; 26.6°
25. 9.48 m at 166°
27. 4.64 m at 78.6° N of E
29. (a) 185 N at 77.8° from the positive x axis
 (b) (39.3 181
31. (a) 2.83 m at 315° (b) 13.4 m at 117°
33. (a) 8.00 12.0 4.00 (b) 2.00 3.00 1.00
 (c) 24.0 36.0 12.0

35. (a) 3.00 2.00 (b) 3.61 at 146° (c) 3.00 6.00
37. (a) 5.00 and 7.00 (b) For vectors to be equal, all their components must be equal. A vector equation contains more information than a scalar equation.
39. 196 cm at 345°
41. (a) 15.1 7.72 cm (b) 7.72 15.1 cm
 (c) 7.72 15.1
43. (a) 20.5 35.5 m (b) 25.0 m
 (c) 61.5 107 m (d) 37.5 m (e) 157 km
45. 1.43 m at 32.2° above the horizontal
47. (a) 10.4 cm (b) 35.5°
49. (a)



- (b) 18.3 b (c) 12.4 b at 233° counterclockwise from east
51. 240 m at 237°
53. (a) 25.4 s (b) 15.0 km/h
55. (a) 0.079 8 N (b) 57.9° (c) 32.1°
57. (a) The x , and y components are, respectively, 2.00, 1.00, and 3.00. (b) 3.74 (c) 57.7° , 74.5° , 36.7°
59. 1.15°
61. (a) (10 000 9 600 $\sin^{1/2}$ cm (b) 270° ; 140 cm (c) 90° ; 20.0 cm (d) They do make sense. The maximum value is attained when θ and ϕ are in the same direction, and it is 60 cm 80 cm. The minimum value is attained when θ and ϕ are in opposite directions, and it is 80 cm 60 cm.
63. (a) 2.00 m/s (b) its velocity vector
65. (a) (b) $1/2$
 (c)
67. (a) (10.0 m, 16.0 m) (b) This center of mass of the tree distribution is the same location whatever order we take the trees in. (We will study center of mass in Chapter 9.)

Chapter 4

Answers to Quick Quizzes

- (a)
2. (i) (b) (ii) (a)
 3. 15° , 30° , 45° , 60° , 75°
 4. (i) (d) (ii) (b)
 5. (i) (b) (ii) (d)

Answers to Odd-Numbered Problems

- (a) 4.87 km at 209° from east (b) 23.3 m/s
 (c) 13.5 m/s at 209°
3. (a) (1.00 0.750) m/s (b) (1.00 0.500) m/s,
 1.12 m/s
5. (a) 18.0 4.00 4.90 , where t is in meters and s is in seconds
 (b) 18.0 4.00 9.80 , where t is in meters per second and s is in seconds
 (c) $= -9.80$
 (d) 54.0 32.1 18.0 25.4 m s;
 $= -9.80$

7. (a) $\vec{v} = -12.0t\hat{j}$, where \vec{v} is in meters per second and t is in seconds (b) $\vec{a} = -12.0\hat{j}$ m/s² (c) $\vec{r} = (3.00\hat{i} - 6.00\hat{j})$ m; $\vec{v} = -12.0\hat{j}$ m/s
9. (a) $(0.800\hat{i} - 0.300\hat{j})$ m/s² (b) 339°
(c) $(360\hat{i} - 72.7\hat{j})$ m, -15.2°
11. 12.0 m/s
13. (a) 2.81 m/s horizontal (b) 60.2° below the horizontal
15. 53.1°
17. (a) 3.96 m/s horizontally forward (b) 9.6%
19. 67.8°
21. $d \tan \theta_i - \frac{gd^2}{2v_i^2 \cos^2 \theta_i}$
23. (a) The ball clears by 0.89 m. (b) while descending
25. (a) 18.1 m/s (b) 1.13 m (c) 2.79 m
27. 9.91 m/s
29. (a) (0, 50.0 m) (b) $v_{xi} = 18.0$ m/s; $v_{yi} = 0$ (c) Particle under constant acceleration (d) Particle under constant velocity (e) $v_{xf} = v_{xi}$; $v_{yf} = -gt$ (f) $x_f = v_{xi}t$; $y_f = y_i - \frac{1}{2}gt^2$ (g) 3.19 s (h) 36.1 m/s, -60.1°
31. 1.92 s
33. 377 m/s²
35. 2.06×10^3 rev/min
37. 0.749 rev/s
39. 7.58×10^3 m/s, 5.80×10^3 s
41. 1.48 m/s² inward and 29.9° backward
43. (a) Yes. The particle can be either speeding up or slowing down, with a tangential component of acceleration of magnitude $\sqrt{6^2 - 4.5^2} = 3.97$ m/s². (b) No. The magnitude of the acceleration cannot be less than $v^2/r = 4.5$ m/s².
45. (a) 1.26 h (b) 1.13 h (c) 1.19 h
47. (a) 15.0 km/h east (b) 15.0 km/h west
(c) 0.016 7 h = 60.0 s
49. (a) 9.80 m/s² down and 2.50 m/s² south (b) 9.80 m/s² down (c) The bolt moves on a parabola with its axis downward and tilting to the south. It lands south of the point directly below its starting point. (d) The bolt moves on a parabola with a vertical axis.
51. (a) $\frac{2d/c}{1 - v^2/c^2}$ (b) $\frac{2d}{c}$

(c) The trip in flowing water takes a longer time interval. The swimmer travels at the low upstream speed for a longer time interval, so his average speed is reduced below c . Mathematically, $1/(1 - v^2/c^2)$ is always greater than 1. In the extreme, as $v \rightarrow c$, the time interval becomes infinite. In that case, the student can never return to the starting point because he cannot swim fast enough to overcome the river current.

53. 15.3 m
55. 54.4 m/s²
57. The relationship between the height h and the walking speed is $h = (4.16 \times 10^{-3})v_x^2$, where h is in meters and v_x is in meters per second. At a typical walking speed of 4 to 5 km/h, the ball would have to be dropped from a height of about 1 cm, clearly much too low for a person's hand. Even at Olympic-record speed for the 100-m run (confirm on the Internet), this situation would only occur if the ball is dropped from about 0.4 m, which is also below the hand of a normally proportioned person.

59. (a) 101 m/s (b) 3.27×10^4 ft (c) 20.6 s
61. (a) 26.9 m/s (b) 67.3 m (c) $(2.00\hat{i} - 5.00\hat{j})$ m/s²
63. (a) $(7.62\hat{i} - 6.48\hat{j})$ cm (b) $(10.0\hat{i} - 7.05\hat{j})$ cm
65. (a) 1.52 km (b) 36.1 s (c) 4.05 km
67. The initial height of the ball when struck is 3.94 m, which is too high for the batter to hit the ball.
69. (a) 1.69 km/s (b) 1.80 h
71. (a) 46.5 m/s (b) -77.6° (c) 6.34 s
73. (a) $x = v_i(0.164\text{ s} + 0.002\,299v_i^2)^{1/2} + 0.047\,94v_i^2$, where x is in meters and v_i is in meters per second (b) 0.041 0 m (c) 961 m (d) $x \approx 0.405v_i$ (e) $x \approx 0.095\,9v_i^2$ (f) The graph of x versus v_i starts from the origin as a straight line with slope 0.405 s. Then it curves upward above this tangent line, becoming closer and closer to the parabola $x = 0.095\,9v_i^2$, where x is in meters and v_i is in meters per second.
75. (a) 6.80 km (b) 3.00 km vertically above the impact point (c) 66.2°
77. (a) 20.0 m/s (b) 5.00 s (c) $(16.0\hat{i} - 27.1\hat{j})$ m/s (d) 6.53 s (e) 24.5 \hat{i} m
79. (a) 4.00 km/h (b) 4.00 km/h
81. (a) 43.2 m (b) $(9.66\hat{i} - 25.6\hat{j})$ m/s (c) Air resistance would ordinarily make the jump distance smaller and the final horizontal and vertical velocity components both somewhat smaller. If a skilled jumper shapes her body into an airfoil, however, she can deflect downward the air through which she passes so that it deflects her upward, giving her more time in the air and a longer jump.
83. (a) swim perpendicular to the banks (b) 133 m (c) 53.1° (d) 107 m
85. 33.5° below the horizontal
87. $\tan^{-1}\left(\frac{\sqrt{2gh}}{v}\right)$
89. Safe distances are less than 270 m or greater than 3.48×10^3 m from the western shore.

Chapter 5

Answers to Quick Quizzes

1. (d)
2. (a)
3. (d)
4. (b)
5. (i) (c) (ii) (a)
6. (b)
7. (b) Pulling up on the rope decreases the normal force, which, in turn, decreases the force of kinetic friction.

Answers to Odd-Numbered Problems

1. (a) 534 N (b) 54.5 kg
3. (a) $(6.00\hat{i} + 15.0\hat{j})$ N (b) 16.2 N
5. (a) $(2.50\hat{i} + 5.00\hat{j})$ N (b) 5.59 N
7. 2.58 N
9. (a) 1.53 m (b) 24.0 N forward and upward at 5.29° with the horizontal
11. (a) 3.64×10^{-18} N (b) 8.93×10^{-30} N is 408 billion times smaller
13. (a) force exerted by spring on hand, to the left; force exerted by spring on wall, to the right (b) force exerted

by wagon on handle, downward to the left; force exerted by wagon on planet, upward; force exerted by wagon on ground, downward (c) force exerted by football on player, downward to the right; force exerted by football on planet, upward (d) force exerted by small-mass object on large-mass object, to the left (e) force exerted by negative charge on positive charge, to the left (f) force exerted by iron on magnet, to the left

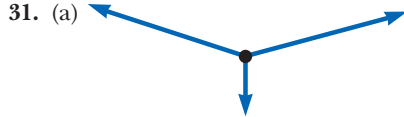
15. (a) 45.0 15.0 m/s (b) 162° from the + axis
 (c) 225 75.0 m (d) 227 79.0

17. (a) — (b) — (c) $\frac{Fh}{mg}$
 (d) —

19. (a) 5.00 m/s at 36.9° (b) 6.08 m/s at 25.3°
 21. (a) 15.0 lb up (b) 5.00 lb up (c) 0
 23. (a) 2.15 N forward (b) 645 N forward (c) 645 N toward the rear (d) 1.02 10 N at 74.1° below the horizontal and rearward

25. (a) 3.43 kN (b) 0.967 m/s horizontally forward
 27. (a) $\cos 40^\circ$ 0 and $\sin 40^\circ$ 220 N 0; 342 N and 262 N (b) $\cos 40^\circ$ (220 N) $\sin 40^\circ$ 0 and $\sin 40^\circ$ (220 N) $\cos 40^\circ$ 0; 262 N and 342 N
 (c) The results agree. The methods are of the same level of difficulty. Each involves one equation in one unknown and one equation in two unknowns. If we are interested in finding without finding , method (b) is simpler.

29. (a) 7.0 m/s horizontal and to the right (b) 21 N
 (c) 14 N horizontal and to the right



(b) 613 N

33. 253 N, 165 N, 325 N

35. 100 N and 204 N

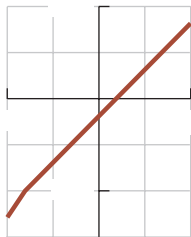
37. 8.66 N east

39. (a) \tan (b) 4.16 m/s

41. (a) 646 N up (b) 646 N up (c) 627 N up (d) 589 N up

43. (a) 79.8 N, 39.9 N (b) 2.34 m/s

45. (a) 19.6 N (b) 78.4 N
 (c)



47. 3.73 m

49. (a) 2.20 m/s (b) 27.4 N

51. (a) 706 N (b) 814 N (c) 706 N (d) 648 N

53. 1.76 kN to the left

55. a) 0.306 (b) 0.245

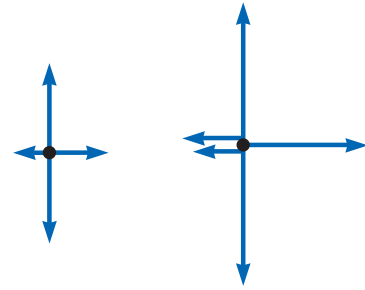
57. = 0.727, 0.577

59. (a) 1.11 s (b) 0.875 s

61. (a) 1.78 m/s (b) 0.368 (c) 9.37 N (d) 2.67 m/s

63. 37.8 N

65. (a)



- (b) 1.29 m/s to the right (c) 27.2 N

67. 6.84 m

69. 0.060 0 m

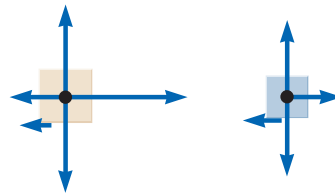
71. (a) 0.087 1 (b) 27.4 N

73. (a) Removing mass (b) 13.7 mi/h · s

75. (a) (b) —

77. (a) 2.22 m (b) 8.74 m/s down the incline

79. (a)

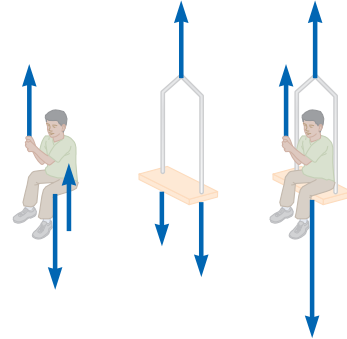


- (b) (c) (d) (e)

- (f) $-\mu$ $-\mu$

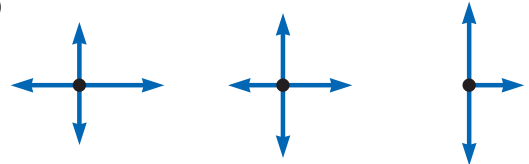
- (g) — $-\mu$

81. (a)



- (b) 0.408 m/s (c) 83.3 N

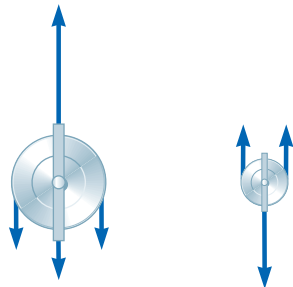
83. (a)



(b) 2.00 m/s to the right (c) 4.00 N on , 6.00 N right on , 8.00 N right on (d) 14.0 N between and , 8.00 N between and (e) The block models the heavy block of wood. The contact force on your back is modeled by the force between the and the blocks, which is much less than the force . The difference between and this contact force is the net force

causing the acceleration of the 5-kg pair of objects. The acceleration is real and nonzero, but it lasts for so short a time that it is never associated with a large velocity. The frame of the building and your legs exert forces, small in magnitude relative to the hammer blow, to bring the partition, block, and you to rest again over a time interval large relative to the hammer blow.

85. (a) *Upper pulley:* *Lower pulley:*



- (b) $\frac{1}{2}$, $\frac{1}{2}$, $\frac{1}{2}$, 3 $\frac{1}{2}$, (c)

87. 0.287

89. (b) If μ is greater than $\tan^{-1}(\mu)$, motion is impossible.

91. (a) The net force on the cushion is in a fixed direction, downward and forward making angle $\tan^{-1}(\mu)$ with the vertical. Starting from rest, it will move along this line with (b) increasing speed. Its velocity changes in magnitude. (c) 1.63 m (d) It will move along a parabola. The axis of the parabola is parallel to the line described in part (a). If the cushion is thrown in a direction above this line, its path will be concave downward, making its velocity become more and more nearly parallel to the line over time. If the cushion is thrown down more steeply, its path will be concave upward, again making its velocity turn toward the fixed direction of its acceleration.

95. (a) 30.7° (b) 0.843 N

97. 72.0 N

99. (a) 0.931 m/s (b) From a value of 0.625 m/s for large μ , the acceleration gradually increases, passes through a maximum, and then drops more rapidly, becoming negative and reaching -2.10 m/s² at 0.

- (c) 0.976 m/s at 25.0 cm (d) 6.10 cm

101. (a) 4.90 m/s (b) 3.13 m/s at 30.0° below the horizontal (c) 1.35 m (d) 1.14 s

- (e) The mass of the block makes no difference.

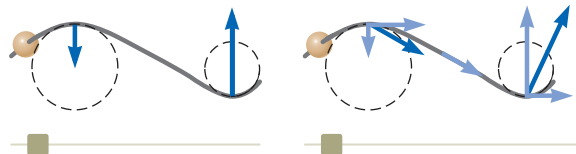
103. (a) 2.13 s (b) 1.66 m

Chapter 6

Answers to Quick Quizzes

- (i) (a) (ii) (b)

(i) Because the speed is constant, the only direction the force can have is that of the centripetal acceleration. The force is larger at $\theta = 30^\circ$ than at $\theta = 60^\circ$ because the radius at $\theta = 30^\circ$ is smaller. There is no force at $\theta = 90^\circ$ because the wire is straight. (ii) In addition to the forces in the centripetal direction in part (a), there are now tangential forces to provide the tangential acceleration. The tangential force is the same at all three points because the tangential acceleration is constant.



3. (c)

4. (a)

Answers to Odd-Numbered Problems

any speed up to 8.08 m/s

- (a) 8.33 N toward the nucleus

- (b) 9.15 m/s inward

5. 6.22

2.14 rev/min

9. (a) static friction (b) 0.085 0

11. 14.3 m/s

13. (a) 1.33 m/s (b) 1.79 m/s at 48.0° inward from the direction of the velocity

15. (a) — (b) 2

17. (a) 8.62 m (b) —, downward (c) 8.45 m/s (d) Calculation of the normal force shows it to be negative, which is impossible. We interpret it to mean that the normal force goes to zero at some point and the passengers will fall out of their seats near the top of the ride if they are not restrained in some way. We could arrive at this same result without calculating the normal force by noting that the acceleration in part (c) is smaller than that due to gravity. The teardrop shape has the advantage of a larger acceleration of the riders at the top of the arc for a path having the same height as the circular path, so the passengers stay in the cars.

19. No. The archeologist needs a vine of tensile strength equal to or greater than 1.38 kN to make it across.

21. (a) 17.0° (b) 5.12 N

23. (a) 491 N (b) 50.1 kg (c) 2.00 m/s

25. 0.527

27. 0.212 m/s, opposite the velocity vector

29. 3.01 N up

31. (a) 1.47 N s/m (b) 2.04 s (c) 2.94

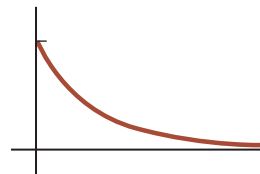
35. (a) 0.034 7 s (b) 2.50 m/s (c)

37. (a) At $\theta = 0^\circ$, the velocity is eastward and the acceleration is southward. (b) At $\theta = 90^\circ$, the velocity is southward and the acceleration is westward.

39. 781 N

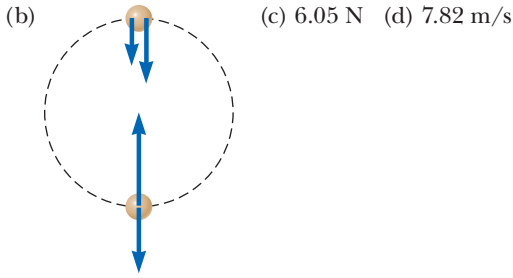
41. (a) mg (b) $\frac{mv^2}{gR}$

43. (a) $\frac{bv^2}{m}$ (b)



- (c) In this model, the object keeps moving forever. (d) It travels a finite distance in an infinite time interval.

45. (a) the downward gravitational force and the tension force in the string, always directed toward the center of the path



47. (a) 106 N up the incline (b) 0.396
 49. (a) 0.016 2 kg/m (b) - (c) 0.778 (d) 1.5% (e) For nested coffee filters falling in air at terminal speed, the graph of air resistance force as a function of the square of speed demonstrates that the force is proportional to the speed squared, within the experimental uncertainty estimated as 2%. This proportionality agrees with the theoretical model of air resistance at high speeds. The drag coefficient of a coffee filter is 0.78 2%.
 51. (cos tan sin
 53. (a) The only horizontal force on the car is the force of friction, with a maximum value determined by the surface roughness (described by the coefficient of static friction) and the normal force (here equal to the gravitational force on the car). (b) 34.3 m (c) 68.6 m (d) Braking is better. You should not turn the wheel. If you used any of the available friction force to change the direction of the car, it would be unavailable to slow the car and the stopping distance would be greater. (e) The conclusion is true in general. The radius of the curve you can barely make is twice your minimum stopping distance.
 55. (a) 735 N (b) 732 N (c) The gravitational force is larger. The normal force is smaller, just like it is when going over the top of a Ferris wheel.
 57. (a) 5.19 m/s (b) (c) 555 N



59. (b) The gravitational and friction forces remain constant, the normal force increases, and the person remains in motion with the wall. (c) The gravitational force remains constant, the normal and friction forces decrease, and the person slides relative to the wall and downward into the pit.
61. (a) $\min \frac{\tan \theta - \mu}{+ \mu \tan} \max \frac{\tan \theta + \mu}{- \mu \tan}$
 (b) tan
 63. 12.8 N
 65. (a) 78.3 m/s (b) 11.1 s (c) 121 m
 67. (a) 8.04 s (b) 379 m/s (c) 1.19 m/s (d) 9.55 cm
 69. (a) 0.013 2 m/s (b) 1.03 m/s (c) 6.87 m/s

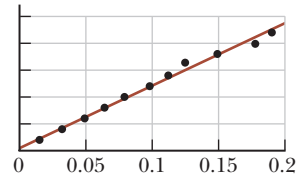
Chapter 7

Answers to Quick Quizzes

- (a)
 2. (c), (a), (d), (b)
 3. (d)
 4. (a)
 5. (b)
 6. (c)
 (i) (c) (ii) (a)
 8. (d)

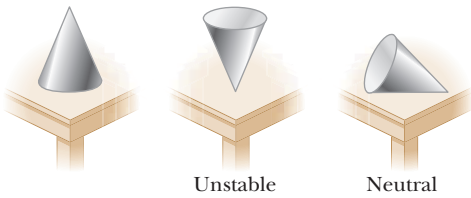
Answers to Odd-Numbered Problems

- (a) 1.59 J (b) smaller (c) the same
 3. (a) 472 J (b) 2.76 kN
 5. (a) 31.9 J (b) 0 (c) 0 (d) 31.9 J
 9. 16.0
 11. (a) 16.0 J (b) 36.9°
 13. 7.05 m at 28.4°
 15. (a) 7.50 J (b) 15.0 J (c) 7.50 J (d) 30.0 J
 17. (a) 0.938 cm (b) 1.25 J
 19. (a) 575 N/m (b) 46.0 J
 21. (a) mg — — (b) — —
 23. (a) Design the spring constant so that the weight of one tray removed from the pile causes an extension of the springs equal to the thickness of one tray. (b) 316 N/m (c) We do not need to know the length and width of the tray.
 25. (b) mgR
 27. (a)



- (b) The slope of the line is 116 N/m. (c) We use all the points listed and also the origin. There is no visible evidence for a bend in the graph or nonlinearity near either end. (d) 116 N/m (e) 12.7 N
 29. 50.0 J
 31. (a) 60.0 J (b) 60.0 J
 33. (a) 1.20 J (b) 5.00 m/s (c) 6.30 J
 35. 878 kN up
 37. (a) 4.56 kJ (b) 4.56 kJ (c) 6.34 kN (d) 422 km/s (e) 6.34 kN (f) The two theories agree.
 39. (a) 97.8 J (b) 4.31 31.6 N (c) 8.73 m/s
 41. (a) 2.5 J (b) 9.8 J (c) 12 J
 43. (a) 196 J (b) 196 J (c) 196 J
 (d) The gravitational force is conservative.
 45. (a) 125 J (b) 50.0 J (c) 66.7 J (d) nonconservative (e) The work done on the particle depends on the path followed by the particle.
 47. away from the other particle
 49.
 51. (a) 40.0 J (b) 40.0 J (c) 62.5 J

53.



55. 90.0 J

57. (a) 8 N/m (b) It lasts for a time interval. If the interaction occupied no time interval, the force exerted by each ball on the other would be infinite, and that can not happen. (c) 0.8 J (d) 0.15 mm (e) 10

59. 0.299 m/s

61. (a) 20.5 14.3 N 36.4 21.0 N
 (b) 15.9 35.3 N
 (c) 3.18 7.07 m
 (d) 5.54 23.7 m
 (e) 2.30 39.3 m (f) 1.48 kJ (g) 1.48 kJ
 (h) The work-kinetic energy theorem is consistent with Newton's second law.

63. 0.131 m

65. (a) (b) The force must be conservative because the work the force does on the particle on which it acts depends only on the original and final positions of the particle, not on the path between them.

67. (a) 3.62 / (4.30 23.4), where is in meters and is in kilograms (b) 0.095 1 m (c) 0.492 m (d) 6.85 m (e) The situation is impossible. (f) The extension is directly proportional to when is only a few grams. Then it grows faster and faster, diverging to infinity for 0.184 kg.

Chapter 8

Answers to Quick Quizzes

(a) For the television set, energy enters by electrical transmission (through the power cord). Energy leaves by heat (from hot surfaces into the air), mechanical waves (sound from the speaker), and electromagnetic radiation (from the screen). (b) For the gasoline-powered lawn mower, energy enters by matter transfer (gasoline). Energy leaves by work (on the blades of grass), mechanical waves (sound), and heat (from hot surfaces into the air). (c) For the hand-cranked pencil sharpener, energy enters by work (from your hand turning the crank). Energy leaves by work (done on the pencil), mechanical waves (sound), and heat due to the temperature increase from friction.

- 2. (i) (b) (ii) (b) (iii) (a)
- 3. (a)
- 4.
- 5. (c)

Answers to Odd-Numbered Problems

- (a) $\int_{int} ER$
- (b) \int_{int}
- (c) (d) 0 ER
- 3. 10.2 m
- 5. (a) $1/2$ (b) 0.098 0 N down
 (a) 4.43 m/s (b) 5.00 m

9. 5.49 m/s

11. $\frac{gh}{15}$

13. —

15. (a) 0.791 m/s (b) 0.531 m/s

17. (a) 5.60 J (b) 2.29 rev

19. (a) 168 J

21. (a) 1.40 m/s (b) 4.60 cm after release (c) 1.79 m/s

23. (a) 160 J (b) 73.5 J (c) 28.8 N (d) 0.679

25. (a) 4.12 m (b) 3.35 m

27. (a) Isolated. The only external influence on the system is the normal force from the slide, but this force is always perpendicular to its displacement so it performs no work on the system. (b) No, the slide is frictionless.

(c) $\int_{system} mgh$ (d) $\int_{system} -mgh$

(e) $\int_{system} mgy_{max}$

(f) $\frac{gh}{\cos}$ (g) $\int_{max} -\cos$ (h) If friction is

present, mechanical energy of the system would *not* be conserved, so the child's kinetic energy at all points after leaving the top of the waterslide would be reduced when compared with the frictionless case. Consequently, her launch speed and maximum height would be reduced as well.

29. 1.23 kW

31. 4.5

33. \$145

35.

37. (a) 423 mi/gal (b) 776 mi/gal

39. 236 s or 3.93 min

41. (a) 10.2 kW (b) 10.6 kW (c) 5.82 MJ

43. (a) 0.588 J (b) 0.588 J (c) 2.42 m/s
 (d) 0.196 J, 0.392 J

45. —

47. (a) , where is in seconds and is in joules (b) 12 and 48 , where is in seconds, is in m/s , and is in newtons (c) $P = 48 \cdot 288$, where is in seconds and is in watts (d) 1.25

49. (a) 11.1 m/s (b) 1.00 J (c) 1.35 m

51. (a) 6.08 J (b) 4.59 J (c) 4.59

53. (a) 4.0 mm (b) 1.0 cm

55. (a) 2.17 kW (b) 58.6 kW

57. (a) 1.38 J (b) 5.51

(c) The value in part (b) represents only energy that leaves the engine and is transformed to kinetic energy of the car. Additional energy leaves the energy by sound and heat. More energy leaves the engine to do work against friction forces and air resistance.

59. (a) 1.53 J at 6.00 cm, 0 J at 0 (b) 1.75 m/s (c) 1.51 m/s (d) The answer to part (c) is not half the answer to part (b) because the equation for the speed of an oscillator is not linear in position

61. (a) 100 J (b) 0.410 m (c) 2.84 m/s (d) 9.80 mm (e) 2.85 m/s

63. 0.328

65. (a) 0.400 m (b) 4.10 m/s (c) The block stays on the track.

67. 33.4 kW

69.

71. 2.92 m/s
 75. (b) 0.342
 77. (a) 14.1 m/s (b) 800 N (c) 771 N (d) 1.57 kN up
 79. (a) $-\mu_k g x/L$ (b) $(\mu_k g L)^{1/2}$
 81. (a) 6.15 m/s (b) 9.87 m/s
 83. less dangerous
 85. (a) 25.8 m (b) 27.1 m/s²

Chapter 9

Answers to Quick Quizzes

1. (d)
 2. (b), (c), (a)
 3. (i) (c), (e) (ii) (b), (d)
 4. (a) All three are the same. (b) dashboard, seat belt, air bag
 5. (a)
 6. (b)
 7. (b)
 8. (i) (a) (ii) (b)

Answers to Odd-Numbered Problems

1. (b) $p = \sqrt{2mK}$
 3. 7.00 N
 5. $\vec{F}_{\text{on bat}} = (+3.26\hat{i} - 3.99\hat{j})$ kN
 7. (a) $\vec{v}_{pi} = -\left(\frac{m_g}{m_g + m_p}\right)v_{gp}\hat{i}$ (b) $\vec{v}_{gi} = \left(\frac{m_p}{m_g + m_p}\right)v_{gp}\hat{i}$
 9. 40.5 g
 11. (a) $-6.00\hat{i}$ m/s (b) 8.40 J (c) The original energy is in the spring. (d) A force had to be exerted over a displacement to compress the spring, transferring energy into it by work. The cord exerts force, but over no displacement. (e) System momentum is conserved with the value zero. (f) The forces on the two blocks are internal forces, which cannot change the momentum of the system; the system is isolated. (g) Even though there is motion afterward, the final momenta are of equal magnitude in opposite directions, so the final momentum of the system is still zero.
 13. (a) 13.5 N · s (b) 9.00 kN
 15. (c) no difference
 17. (a) 9.60×10^{-2} s (b) 3.65×10^5 N (c) 26.6g
 19. (a) $12.0\hat{i}$ N · s (b) $4.80\hat{i}$ m/s (c) $2.80\hat{i}$ m/s (d) $2.40\hat{i}$ N
 21. 16.5 N
 23. 301 m/s
 25. (a) 2.50 m/s (b) 37.5 kJ
 27. (a) 0.284 (b) 1.15×10^{-13} J and 4.54×10^{-14} J
 29. (a) 4.85 m/s (b) 8.41 m
 31. 91.2 m/s
 33. 0.556 m
 35. (a) 1.07 m/s at -29.7° (b) $\frac{\Delta K}{K_i} = -0.318$
 37. $(3.00\hat{i} - 1.20\hat{j})$ m/s
 39. $v_O = v_i \cos \theta$, $v_Y = v_i \sin \theta$
 41. 2.50 m/s at -60.0°
 43. (a) $(-9.33\hat{i} - 8.33\hat{j})$ Mm/s (b) 439 fJ
 45. $\vec{r}_{\text{CM}} = (0\hat{i} + 1.00\hat{j})$ m
 47. 3.57×10^8 J
 49. (a) 15.9 g (b) 0.153 m
 51. (a) $(1.40\hat{i} + 2.40\hat{j})$ m/s (b) $(7.00\hat{i} + 12.0\hat{j})$ kg · m/s
 53. 0.700 m
 55. (a) $\vec{v}_{1f} = -0.780\hat{i}$ m/s, $\vec{v}_{2f} = 1.12\hat{i}$ m/s
 (b) $\vec{v}_{\text{CM}} = 0.360\hat{i}$ m/s before and after the collision
 57. (b) The bumper continues to exert a force to the left until the particle has swung down to its lowest point.
 59. (a) $\sqrt{\frac{F(2d - \ell)}{2m}}$ (b) $\frac{F\ell}{2}$
 61. 15.0 N in the direction of the initial velocity of the exiting water stream.
 63. (a) 442 metric tons (b) 19.2 metric tons (c) It is much less than the suggested value of 442/2.50. Mathematically, the logarithm in the rocket propulsion equation is not a linear function. Physically, a higher exhaust speed has an extra-large cumulative effect on the rocket body's final speed by counting again and again in the speed the body attains second after second during its burn.
 65. (a) zero (b) $\frac{mv_i}{\sqrt{2}}$ upward
 67. 260 N normal to the wall
 69. (a) $1.33\hat{i}$ m/s (b) $-235\hat{i}$ N (c) 0.680 s (d) $-160\hat{i}$ N · s and $+160\hat{i}$ N · s (e) 1.81 m (f) 0.454 m (g) -427 J (h) $+107$ J (i) The change in kinetic energy of one member of the system, according to Equation 8.2, will be equal to the negative of the change in internal energy for that member: $\Delta K = -\Delta E_{\text{int}}$. The change in internal energy, in turn, is the product of the friction force and the distance through which the member moves. Equal friction forces act on the person and the cart, but the forces move through different distances, as we see in parts (e) and (f). Therefore, there are different changes in internal energy for the person and the cart and, in turn, different changes in kinetic energy. The total change in kinetic energy of the system, -320 J, becomes $+320$ J of extra internal energy in the entire system in this perfectly inelastic collision.
 71. (a) Momentum of the bullet–block system is conserved in the collision, so you can relate the speed of the block and bullet immediately after the collision to the initial speed of the bullet. Then, you can use conservation of mechanical energy for the bullet–block–Earth system to relate the speed after the collision to the maximum height. (b) 521 m/s upward
 73. $2v_i$ for the particle with mass m and 0 for the particle with mass $3m$.
 75. (a) $\frac{m_1 v_1 + m_2 v_2}{m_1 + m_2}$ (b) $(v_1 - v_2)\sqrt{\frac{m_1 m_2}{k(m_1 + m_2)}}$
 (c) $v_{1f} = \frac{(m_1 - m_2)v_1 + 2m_2 v_2}{m_1 + m_2}$,
 $v_{2f} = \frac{2m_1 v_1 + (m_2 - m_1)v_2}{m_1 + m_2}$
 77. m_1 : 13.9 m m_2 : 0.556 m
 79. 0.960 m
 81. 143 m/s
 83. (a) 0; inelastic (b) $(-0.250\hat{i} + 0.75\hat{j} - 2.00\hat{k})$ m/s; perfectly inelastic (c) either $a = -6.74$ with $\vec{v} = -0.419\hat{k}$ m/s or $a = 2.74$ with $\vec{v} = -3.58\hat{k}$ m/s
 85. 0.403
 87. (a) $-0.256\hat{i}$ m/s and $0.128\hat{i}$ m/s
 (b) $-0.0642\hat{i}$ m/s and 0 (c) 0 and 0
 89. (a) 100 m/s (b) 374 J

91. (a) 2.67 m/s (incident particle), 10.7 m/s (target particle) (b) -5.33 m/s (incident particle), 2.67 m/s (target particle) (c) 7.11×10^{-3} J in case (a) and 2.84×10^{-2} J in case (b). The incident particle loses more kinetic energy in case (a), in which the target mass is 1.00 g.
93. (a) particle of mass m : $\sqrt{2}v_i$; particle of mass $3m$: $\sqrt{\frac{2}{3}}v_i$ (b) 35.3°
95. (a) $v_{\text{CM}} = \sqrt{\frac{F}{2m}(x_1 + x_2)}$
 (b) $\theta = \cos^{-1} \left[1 - \frac{F}{2mgL}(x_1 - x_2) \right]$

Chapter 10

Answers to Quick Quizzes

- (i) (c) (ii) (b)
- (b)
- (i) (b) (ii) (a)
- (i) (b) (ii) (a)
- (b)
- (a)
- (b)

Answers to Odd-Numbered Problems

- (a) 7.27×10^{-5} rad/s (b) Because of its angular speed, the Earth bulges at the equator.
- (a) 5.00 rad, 10.0 rad/s, 4.00 rad/s² (b) 53.0 rad, 22.0 rad/s, 4.00 rad/s²
- (a) 4.00 rad/s² (b) 18.0 rad
- (a) 5.24 s (b) 27.4 rad
- (a) 8.21×10^2 rad/s² (b) 4.21×10^3 rad
- 13.7 rad/s²
- 3.10 rad/s
- (a) 0.180 rad/s (b) 8.10 m/s² radially inward
- (a) 25.0 rad/s (b) 39.8 rad/s² (c) 0.628 s
- (a) 8.00 rad/s (b) 8.00 m/s (c) 64.1 m/s² at an angle 3.58° from the radial line to point P (d) 9.00 rad
- (a) 126 rad/s (b) 3.77 m/s (c) 1.26 km/s² (d) 20.1 m
- 0.572
- (a) 3.47 rad/s (b) 1.74 m/s (c) 2.78 s (d) 1.02 rotations
- -3.55 N · m
- 21.5 N
- 177 N
- (a) 24.0 N · m (b) 0.035 6 rad/s² (c) 1.07 m/s²
- (a) 21.6 kg · m² (b) 3.60 N · m (c) 52.5 rev
- 0.312
- (a) 5.80 kg · m²
 (b) Yes, knowing the height of the door is unnecessary.
- 1.28 kg · m²
- $\frac{11}{12}mL^2$
- (a) 143 kg · m² (b) 2.57 kJ
- (a) 24.5 m/s (b) no (c) no (d) no (e) no (f) yes
- 1.03×10^{-3} J
- 149 rad/s
- (a) 1.59 m/s (b) 53.1 rad/s
- (a) 11.4 N (b) 7.57 m/s² (c) 9.53 m/s (d) 9.53 m/s
- (a) $2(Rg/3)^{1/2}$ (b) $4(Rg/3)^{1/2}$ (c) $(Rg)^{1/2}$
- (a) 500 J (b) 250 J (c) 750 J
- (a) $\frac{2}{3}g \sin \theta$ (b) The acceleration of $\frac{1}{2}g \sin \theta$ for the hoop is smaller than that for the disk. (c) $\frac{1}{3} \tan \theta$
- (a) The disk (b) disk: $\sqrt{\frac{4}{3}gh}$; hoop: \sqrt{gh}
- (a) 1.21×10^{-4} kg · m² (b) Knowing the height of the can is unnecessary. (c) The mass is not uniformly distributed; the density of the metal can is larger than that of the soup.
- (a) 4.00 J (b) 1.60 s (c) 0.80 m
- (a) 12.5 rad/s (b) 128 rad
- (a) 0.496 W (b) 413 W
- (a) $(3g/L)^{1/2}$ (b) $3g/2L$ (c) $-\frac{3}{2}g\hat{i} - \frac{3}{4}g\hat{j}$
 (d) $-\frac{3}{2}Mg\hat{i} + \frac{1}{4}Mg\hat{j}$
- $\frac{g(h_2 - h_1)}{2\pi R^2}$
- (a) Particle under a net force (b) Rigid object under a net torque (c) 118 N (d) 156 N (e) $\frac{r^2}{a}(T_2 - T_1)$ (f) 1.17 kg · m²
- $\omega = \sqrt{\frac{2mgd \sin \theta + kd^2}{I + mR^2}}$
- $\sqrt{\frac{10}{7} \left[\frac{g(R-r)(1-\cos \theta)}{r^2} \right]}$
- (a) 2.70R (b) $F_x = -20mg/7$, $F_y = -mg$
- (a) $\sqrt{\frac{3}{4}gh}$ (b) $\sqrt{\frac{3}{4}gh}$
- (a) 0.800 m/s² (b) 0.400 m/s²
 (c) 0.600 N, 0.200 N forward
- (a) $\sigma = 0.060$ 2 s⁻¹, $\omega_0 = 3.50$ rad/s (b) $\alpha = -0.176$ rad/s²
 (c) 1.29 rev (d) 9.26 rev
- (b) to the left
- (a) 2.88 s (b) 12.8 s

Chapter 11

Answers to Quick Quizzes

- (d)
- (i) (a) (ii) (c)
- (b)
- (a)

Answers to Odd-Numbered Problems

- $\hat{i} + 8.00\hat{j} + 22.0\hat{k}$
- (a) $7.00\hat{k}$ (b) 60.3°
- (a) 30 N · m (counterclockwise)
 (b) 36 N · m (counterclockwise)
- 45.0°
- (a) $F_3 = F_1 + F_2$ (b) no
- $17.5\hat{k}$ kg · m²/s
- $m(xv_y - yv_x)\hat{k}$
- (a) zero (b) $(-mv_i^3 \sin^2 \theta \cos \theta / 2g)\hat{k}$
 (c) $(-2mv_i^3 \sin^2 \theta \cos \theta / g)\hat{k}$
 (d) The downward gravitational force exerts a torque on the projectile in the negative z direction.
- $mvR[\cos(vt/R) + 1]\hat{k}$
- $60.0\hat{k}$ kg · m²/s
- (a) $-m\ell g t \cos \theta \hat{k}$ (b) The Earth exerts a gravitational torque on the ball. (c) $-mg\ell \cos \theta \hat{k}$
- 1.20 kg · m²/s
- (a) 0.360 kg · m²/s (b) 0.540 kg · m²/s
- (a) 0.433 kg · m²/s (b) 1.73 kg · m²/s
- (a) 1.57×10^8 kg · m²/s (b) 6.26×10^3 s = 1.74 h
- 7.14 rev/min

33. (a) The mechanical energy of the system is not constant. Some chemical energy is converted into mechanical energy. (b) The momentum of the system is not constant. The turntable bearing exerts an external northward force on the axle. (c) The angular momentum of the system is constant. (d) 0.360 rad/s counterclockwise (e) 99.9 J
35. (a) 11.1 rad/s counterclockwise (b) No; 507 J is transformed into internal energy. (c) No; the turntable bearing promptly imparts impulse 44.9 kg m/s north into the turntable-clay system and thereafter keeps changing the system momentum.
37. (a) down (b) / (
39. (a) (b) No; some mechanical energy of the system changes into internal energy. (c) The momentum of the system is not constant. The axle exerts a backward force on the cylinder when the clay strikes.
41. (a) yes (b) 4.50 kg /s (c) No. In the perfectly inelastic collision, kinetic energy is transformed to internal energy. (d) 0.749 rad/s (e) The total energy of the system *must* be the same before and after the collision, assuming we ignore the energy leaving by mechanical waves (sound) and heat (from the newly-warmer door to the cooler air). The kinetic energies are as follows: 2.50 J; 1.69 J. Most of the initial kinetic energy is transformed to internal energy in the collision.
43. 5.46
45. 0.910 km/s
47. 7.50
49. (a) 7 /3 (b) mgd (c) 3 counterclockwise (d) 2 /7 upward (e) mgd (f) (g) $14gd$ (h) gd 21
51. (a) isolated system (angular momentum) (b) /2 (c) $\frac{mv}{12}$ - (d) $\frac{mv}{12}$ - (e) $\frac{mv}{12}$ (f) $-mv$ (g) (h)
53. (a) (b) (c) $-mv$
55. (a) 3 750 kg m /s (b) 1.88 kJ (c) 3 750 kg m /s (d) 10.0 m/s (e) 7.50 kJ (f) 5.62 kJ
57. (a) 2 (b) 2 /3 (c) 4 /3 (d) 4 (e) (f) 26 /27 (g) No horizontal forces act on the bola from outside after release, so the horizontal momentum stays constant. Its center of mass moves steadily with the horizontal velocity it had at release. No torques about its axis of rotation act on the bola, so the angular momentum stays constant. Internal forces cannot affect momentum conservation and angular momentum conservation, but they can affect mechanical energy.
59. an increase of 6.368 % or 0.550 s, which is not significant
61. (a) - (b) - (c) (d) $\frac{1}{18}$
63. $-ga$

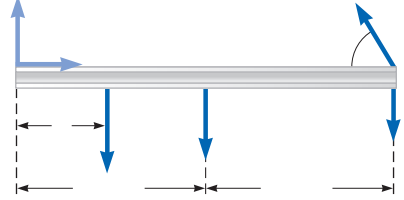
Chapter 12

Answers to Quick Quizzes

- (a)
2. (b)

3. (b)
4. (i) (b) (ii) (a) (iii) (c)

Answers to Odd-Numbered Problems

- 0, 0,
cos sin 0.5 cos
3. (3.85 cm, 6.85 cm)
5. 0.750 m
(2.54 m, 4.75 m)
9. 177 kg
11. Sam exerts an upward force of 176 N, and Joe exerts an upward force of 274 N.
13. (a) 268 N, 1 300 N (b) 0.324
15. (a) 29.9 N (b) 22.2 N
17. (a) 1.04 kN at 60.0° upward and to the right (b) 370 910 N
19. (a) 27.7 kN (b) 11.5 kN (c) 4.19 kN
21. (a) 859 N (b) 1.04 kN at 36.9° to the left and upward
23. 2.81 m
25. 501 N, 672 N, 384 N
27. (a) 0.053 (b) 1.09 kg/m
(c) With only a 5% change in volume in this extreme case, liquid water is indeed nearly incompressible in biological and student laboratory situations.
29. 23.8
31. (a) 3.14 N (b) 6.28
33. 4.90 mm
35. 0.029 2 mm
37. 5.98 N, 4.80
39. 0.896 m
41. 724 N, 716 N
43. (a) 
- (b) 343 N, 171 N to the right, 683 N up
(c) 5.14 m
45. (a))/[sin (2)]
(b)) cot /(2); /(2)
47. 6.47 10 1.27 10 N,
6.47 10 N
49. (a) 5.08 kN (b) 4.77 kN (c) 8.26 kN
51. (a) - $\frac{\sin \theta - \cos}{\cos \theta - \mu \sin}$ (b) + μ
(c) + μ
53. (a) 9.28 kN (b) The moment arm of the force is no longer 70 cm from the shoulder joint but only 49.5 cm, therefore reducing to 6.56 kN.
55. (a) 66.7 N (b) increasing at 0.125 N/s
57. (a) $\frac{mgd}{15}$ (b) mg $\frac{mgd}{15}$
(c) $\frac{mgd}{15}$ $\frac{mgd}{15}$ (to the right and downward on the right half of the ladder)
59. (a) 1.67 N, 3.33 N (b) 2.36 N

61. 5.73 rad/s
 63. (a) 443 N (b) 221 N (to the right), 217 N (upward)
 65. 9.00 ft
 67. $3F_g/8$

Chapter 13

Answers to Quick Quizzes

1. (e)
 2. (c)
 3. (a)
 4. (a) Perihelion (b) Aphelion (c) Perihelion (d) All points

Answers to Odd-Numbered Problems

1. 7.41×10^{-10} N
 3. (a) 2.50×10^{-7} N toward the 500-kg object (b) between the objects and 2.45 m from the 500-kg object
 5. 2.67×10^{-7} m/s²
 7. 2.97 nN
 9. 2.00 kg and 3.00 kg
 11. 0.614 m/s², toward Earth
 13. (a) 7.61 cm/s² (b) 363 s (c) 3.08 km (d) 28.9 m/s at 72.9° below the horizontal
 15. $\frac{GM}{\ell^2}(\frac{1}{2} + \sqrt{2})$ at 45° to the positive x axis
 17. 1.50 h or 90.0 min
 19. (a) 0.71 yr (b) The departure must be timed so that the spacecraft arrives at the aphelion when the target planet is there.
 21. 1.26×10^{32} kg
 23. 35.1 AU
 25. 4.99 days
 27. 8.92×10^7 m
 29. (a) yes (b) 3.93 yr
 31. 2.82×10^9 J
 33. (a) 1.84×10^9 kg/m³ (b) 3.27×10^6 m/s² (c) -2.08×10^{13} J
 35. (a) -1.67×10^{-14} J (b) The particles collide at the center of the triangle.
 37. 1.58×10^{10} J
 39. (a) 4.69×10^8 J (b) -4.69×10^8 J (c) 9.38×10^8 J
 41. 1.78×10^3 m
 43. (a) 850 MJ (b) 2.71×10^9 J
 45. (a) 5.30×10^3 s (b) 7.79 km/s (c) 6.43×10^9 J
 47. (a) same size force (b) 15.6 km/s
 49. 2.52×10^7 m
 51. $\omega = 0.0572$ rad/s or 1 rev in 110 s
 53. (a) 2.43 h (b) 6.59 km/s (c) 4.74 m/s² toward the Earth
 55. 2.25×10^{-7}
 57. (a) 1.00×10^7 m (b) 1.00×10^4 m/s
 59. (a) 15.3 km (b) 1.66×10^{16} kg (c) 1.13×10^4 s (d) No; its mass is so large compared with yours that you would have a negligible effect on its rotation.
 61. (a) $v_1 = m_2 \sqrt{\frac{2G}{d(m_1 + m_2)}}$, $v_2 = m_1 \sqrt{\frac{2G}{d(m_1 + m_2)}}$,

$$v_{\text{rel}} = \sqrt{\frac{2G(m_1 + m_2)}{d}}$$
 (b) 1.07×10^{32} J and 2.67×10^{31} J
 63. (a) -7.04×10^4 J (b) -1.57×10^5 J (c) 13.2 m/s
 65. 7.79×10^{14} kg

67. (a) 2×10^8 yr (b) $\sim 10^{41}$ kg (c) 10^{11}
 69. (a) 2.93×10^4 m/s (b) $K = 2.74 \times 10^{33}$ J, $U = -5.39 \times 10^{33}$ J (c) $K = 2.56 \times 10^{33}$ J, $U = -5.21 \times 10^{33}$ J (d) Yes; $E = -2.65 \times 10^{33}$ J at both aphelion and perihelion.
 71. 119 km
 73. $\sqrt{\frac{GM}{4R_E}}$
 75. $(800 + 1.73 \times 10^{-4})\hat{i}$ m/s and $(800 - 1.73 \times 10^{-4})\hat{i}$ m/s
 77. 18.2 ms
 79. (a) -3.67×10^7 J (b) 9.24×10^{10} kg · m²/s (c) $v = 5.58$ km/s, $r = 1.04 \times 10^7$ m (d) 8.69×10^6 m (e) 134 min

Chapter 14

Answers to Quick Quizzes

1. (a)
 2. (a)
 3. (c)
 4. (b) or (c)
 5. (a)

Answers to Odd-Numbered Problems

1. 2.96×10^6 Pa
 3. (a) 6.24 MPa (b) Yes; this pressure could puncture the vinyl flooring.
 5. 24.8 kg
 7. 8.46 m
 9. 7.74×10^{-3} m²
 11. (a) 3.71×10^5 Pa (b) 3.57×10^4 N
 13. 2.71×10^5 N
 15. (a) 2.94×10^4 N (b) 1.63×10^4 N · m
 17. 2.31 lb
 19. 98.6 kPa
 21. (a) 10.5 m (b) No. The vacuum is not as good because some alcohol and water will evaporate. The equilibrium vapor pressures of alcohol and water are higher than the vapor pressure of mercury.
 23. (a) 116 kPa (b) 52.0 Pa
 25. 0.258 N down
 27. (a) 4.9 N down, 16.7 N up (b) 86.2 N (c) By either method of evaluation, the buoyant force is 11.8 N up.
 29. (a) 7.00 cm (b) 2.80 kg
 31. (a) 1 250 kg/m³ (b) 500 kg/m³
 33. (a) 408 kg/m³ (b) When m is less than 0.310 kg, the wooden block will be only partially submerged in the water. (c) When m is greater than 0.310 kg, the wooden block and steel object will sink.
 35. (a) 3.82×10^3 N (b) 1.04×10^3 N; the balloon rises because the net force is positive: the upward buoyant force is greater than the downward gravitational force. (c) 106 kg
 37. (a) 11.6 cm (b) 0.963 g/cm³ (c) No; the density ρ is not linear in h .
 39. 1.52×10^3 m³
 41. (a) 17.7 m/s (b) 1.73 mm
 43. 0.247 cm
 45. (a) 2.28 N toward Holland (b) 1.74×10^6 s
 47. (a) 15.1 MPa (b) 2.95 m/s

49. (a) 1.91 m/s (b) $8.65 \times 10^{-4} \text{ m}^3/\text{s}$
 51. 347 m/s
 53. (a) 4.43 m/s (b) 10.1 m
 55. 12.6 m/s
 57. (a) $1.02 \times 10^7 \text{ Pa}$ (b) $6.61 \times 10^5 \text{ N}$
 59. (a) 6.70 cm (b) 5.74 cm
 61. 2.25 m
 63. 455 kPa
 65. 0.556 m
 67. $160 \text{ kg}/\text{m}^3$
 69. (a) 8.01 km (b) yes
 71. upper scale: 17.3 N; lower scale: 31.7 N
 73. 91.64%
 75. $27 \text{ N} \cdot \text{m}$
 77. 758 Pa
 79. 4.43 m/s
 81. (a) 1.25 cm (b) 14.3 m/s
 85. (a) 18.3 mm (b) 14.3 mm (c) 8.56 mm

Chapter 15

Answers to Quick Quizzes

1. (d)
 2. (f)
 3. (a)
 4. (b)
 5. (c)
 6. (i) (a) (ii) (a)

Answers to Odd-Numbered Problems

1. (a) 17 N to the left (b) $28 \text{ m}/\text{s}^2$ to the left
 3. 0.63 s
 5. (a) 1.50 Hz (b) 0.667 s (c) 4.00 m (d) $\pi \text{ rad}$ (e) 2.83 m
 7. 0.628 m/s
 9. 40.9 N/m
 11. 12.0 Hz
 13. (a) -2.34 m (b) -1.30 m/s (c) -0.076 3 m (d) 0.315 m/s
 15. (a) $x = 2.00 \cos(3.00\pi t - 90^\circ)$ or $x = 2.00 \sin(3.00\pi t)$ where x is in centimeters and t is in seconds (b) 18.8 cm/s (c) 0.333 s (d) $178 \text{ cm}/\text{s}^2$ (e) 0.500 s (f) 12.0 cm
 17. (a) 20 cm (b) 94.2 cm/s as the particle passes through equilibrium (c) $\pm 17.8 \text{ m}/\text{s}^2$ at maximum excursion from equilibrium
 19. (a) 40.0 cm/s (b) $160 \text{ cm}/\text{s}^2$ (c) 32.0 cm/s (d) $-96.0 \text{ cm}/\text{s}^2$ (e) 0.232 s
 21. 2.23 m/s
 23. (a) 0.542 kg (b) 1.81 s (c) $1.20 \text{ m}/\text{s}^2$
 25. 2.60 cm and -2.60 cm
 27. (a) 28.0 mJ (b) 1.02 m/s (c) 12.2 mJ (d) 15.8 mJ
 29. (a) $\frac{8}{9}E$ (b) $\frac{1}{9}E$ (c) $x = \pm\sqrt{\frac{2}{3}}A$
 (d) No; the maximum potential energy is equal to the total energy of the system. Because the total energy must remain constant, the kinetic energy can never be greater than the maximum potential energy.
 31. (a) 4.58 N (b) 0.125 J (c) $18.3 \text{ m}/\text{s}^2$ (d) 1.00 m/s (e) smaller (f) the coefficient of kinetic friction between the block and surface (g) 0.934
 33. (b) 0.628 s

35. (a) 1.50 s (b) 0.559 m
 37. $0.944 \text{ kg} \cdot \text{m}^2$
 39. 1.42 s, 0.499 m
 41. (a) 0.820 m/s (b) $2.57 \text{ rad}/\text{s}^2$ (c) 0.641 N
 (d) $v_{\text{max}} = 0.817 \text{ m/s}$, $\alpha_{\text{max}} = 2.54 \text{ rad}/\text{s}^2$, $F_{\text{max}} = 0.634 \text{ N}$
 (e) The answers are close but not exactly the same. The answers computed from conservation of energy and from Newton's second law are more precise.
 43. (a) 3.65 s (b) 6.41 s (c) 4.24 s
 45. (a) $5.00 \times 10^{-7} \text{ kg} \cdot \text{m}^2$ (b) $3.16 \times 10^{-4} \text{ N} \cdot \text{m}/\text{rad}$
 47. (a) 7.00 Hz (b) 2.00% (c) 10.6 s
 51. 11.0 cm
 53. (a) 3.16 s^{-1} (b) 6.28 s^{-1} (c) 5.09 cm
 55. 0.641 Hz or 1.31 Hz
 57. (a) 2.09 s (b) 0.477 Hz (c) 36.0 cm/s (d) $E = 0.064 8m$, where E is in joules and m is in kilograms (e) $k = 9.00m$, where k is in newtons/meter and m is in kilograms (f) Period, frequency, and maximum speed are all independent of mass in this situation. The energy and the force constant are directly proportional to mass.
 59. (a) $2Mg$ (b) $Mg\left(1 + \frac{y}{L}\right)$ (c) $\frac{4\pi}{3}\sqrt{\frac{2L}{g}}$ (d) 2.68 s
 61. $1.56 \times 10^{-2} \text{ m}$
 63. (a) $L_{\text{Earth}} = 25 \text{ cm}$ (b) $L_{\text{Mars}} = 9.4 \text{ cm}$ (c) $m_{\text{Earth}} = 0.25 \text{ kg}$ (d) $m_{\text{Mars}} = 0.25 \text{ kg}$
 65. 6.62 cm
 67. $\frac{1}{2\pi L}\sqrt{gL + \frac{kh^2}{M}}$
 69. 7.75 s^{-1}
 71. (a) 1.26 m (b) 1.58 (c) The energy decreases by 120 J. (d) Mechanical energy is transformed into internal energy in the perfectly inelastic collision.
 73. (a) $\omega = \sqrt{\frac{200}{0.400 + M}}$, where ω is in s^{-1} and M is in kilograms (b) 22.4 s^{-1} (c) 22.4 s^{-1}
 75. (a) 3.00 s (b) 14.3 J (c) $\theta = 25.5^\circ$
 77. (b) 1.46 s
 79. (a) $x = 2 \cos\left(10t + \frac{\pi}{2}\right)$ (b) $\pm 1.73 \text{ m}$ (c) $0.105 \text{ s} = 105 \text{ ms}$ (d) 0.098 0 m
 81. (b) $T = \frac{2}{r}\sqrt{\frac{\pi M}{\rho g}}$
 83. $9.12 \times 10^{-5} \text{ s}$
 85. (a) 0.500 m/s (b) 8.56 cm
 87. (a) $\frac{1}{2}(M + \frac{1}{3}m)v^2$ (b) $2\pi\sqrt{\frac{M + \frac{1}{3}m}{k}}$
 89. (a) $\frac{2\pi}{\sqrt{g}}\sqrt{L_i + \frac{1}{2\rho a^2}\left(\frac{dM}{dt}\right)t}$ (b) $2\pi\sqrt{\frac{L_i}{g}}$

Chapter 16

Answers to Quick Quizzes

1. (i) (b) (ii) (a)
 2. (i) (c) (ii) (b) (iii) (d)
 3. (c)
 4. (f) and (h)
 5. (d)

Answers to Odd-Numbered Problems

1. 184 km
3. $y = \frac{6.00}{(x - 4.50t)^2 + 3.00}$ where x and y are in meters and t is in seconds
5. (a) 2.00 cm (b) 2.98 m (c) 0.576 Hz (d) 1.72 m/s
7. 0.319 m
9. (a) $3.33\hat{i}$ m/s (b) -5.48 cm (c) 0.667 m (d) 5.00 Hz (e) 11.0 m/s
11. (a) 31.4 rad/s (b) 1.57 rad/m
(c) $y = 0.120 \sin(1.57x - 31.4t)$, where x and y are in meters and t is in seconds (d) 3.77 m/s (e) 118 m/s²
13. (a) 0.500 Hz (b) 3.14 rad/s (c) 3.14 rad/m
(d) $0.100 \sin(\pi x - \pi t)$ (e) $0.100 \sin(-\pi t)$
(f) $0.100 \sin(4.71 - \pi t)$ (g) 0.314 m/s
15. (a) -1.51 m/s (b) 0 (c) 16.0 m (d) 0.500 s (e) 32.0 m/s
17. (a) 0.250 m (b) 40.0 rad/s (c) 0.300 rad/m (d) 20.9 m (e) 133 m/s (f) positive x direction
19. (a) $y = 0.080 \sin(2.5\pi x + 6\pi t)$
(b) $y = 0.080 \sin(2.5\pi x + 6\pi t - 0.25\pi)$
21. 185 m/s
23. 13.5 N
25. 80.0 N
27. 0.329 s
29. (a) 0.051 0 kg/m (b) 19.6 m/s
31. 631 N
33. (a) 1 (b) 1 (c) 1 (d) increased by a factor of 4
35. (a) 62.5 m/s (b) 7.85 m (c) 7.96 Hz (d) 21.1 W
37. (a) $y = 0.075 \sin(4.19x - 314t)$, where x and y are in meters and t is in seconds (b) 625 W
39. (a) 15.1 W (b) 3.02 J
45. 0.456 m/s
47. 14.7 kg
49. (a) 39.2 N (b) 0.892 m (c) 83.6 m/s
51. (a) 21.0 ms (b) 1.68 m
53. $\sqrt{\frac{mL}{Mg \sin \theta}}$
55. 0.084 3 rad
57. $\frac{1}{\omega} \sqrt{\frac{m}{M}}$
59. (a) $v = \sqrt{\frac{T}{\rho(1.00 \times 10^{-5} x + 1.00 \times 10^{-6})}}$, where v is in meters per second, T is in newtons, ρ is in kilograms per meter cubed, and x is in meters
(b) $v(0) = 94.3$ m/s, $v(10.0 \text{ m}) = 9.38$ m/s
61. (a) $\frac{\mu\omega^3}{2k} A_0^2 e^{-2bx}$ (b) $\frac{\mu\omega^3}{2k} A_0^2$ (c) e^{-2bx}
63. 3.86×10^{-4}
65. (a) $(0.707)(2\sqrt{L/g})$ (b) $L/4$
67. (a) μv_0^2 (b) v_0 (c) clockwise: 4π ; counterclockwise: 0

Chapter 17

Answers to Quick Quizzes

1. (c)
2. (b)
3. (b)
4. (e)

5. (e)
6. (b)

Answers to Odd-Numbered Problems

1. (a) 2.00 μm (b) 40.0 cm (c) 54.6 m/s (d) $-0.433 \mu\text{m}$ (e) 1.72 mm/s
3. $\Delta P = 0.200 \sin(20\pi x - 6860\pi t)$ where ΔP is in pascals, x is in meters, and t is in seconds
5. 0.103 Pa
7. 0.196 s
9. (a) 0.625 mm (b) 1.50 mm to 75.0 μm
11. (a) 5.56 km (b) No. The speed of light is much greater than the speed of sound, so the time interval required for the light to reach you is negligible compared to the time interval for the sound.
13. 7.82 m
15. (a) 27.2 s (b) 25.7 s; the time interval in part (a) is longer.
17. (a) the pulse that travels through the rail (b) 23.4 ms
19. 66.0 dB
21. (a) 3.75 W/m² (b) 0.600 W/m²
23. 3.0×10^{-8} W/m²
25. (a) 0.691 m (b) 691 km
27. (a) 1.3×10^2 W (b) 96 dB
29. (a) 2.34 m (b) 0.390 m (c) 0.161 Pa (d) 0.161 Pa (e) 4.25×10^{-7} m (f) 7.09×10^{-8} m
31. (a) 1.32×10^{-4} W/m² (b) 81.2 dB
33. 68.3 dB
35. (a) 30.0 m (b) 9.49×10^5 m
37. (a) 475 Hz (b) 430 Hz
39. (a) 3.04 kHz (b) 2.08 kHz (c) 2.62 kHz; 2.40 kHz
41. (a) 441 Hz (b) 439 Hz (c) 54.0 dB
43. (a) 0.021 7 m/s (b) 28.9 Hz (c) 57.8 Hz
45. 26.4 m/s
47. (a) 56.3 s (b) 56.6 km farther along
49. 0.883 cm
51. (a) 0.515 trucks per minute (b) 0.614 trucks per minute
53. 67.0 dB
55. (a) 4.16 m (b) 0.455 μs (c) 0.157 mm
57. It is unreasonable, implying a sound level of 123 dB. Nearly all the decrease in mechanical energy becomes internal energy in the latch.
59. (a) 5.04×10^3 m/s (b) 1.59×10^{-4} s (c) 1.90×10^{-3} m (d) 2.38×10^{-3} (e) 4.76×10^8 N/m² (f) $\frac{\sigma_y}{\sqrt{\rho Y}}$
61. (a) 55.8 m/s (b) 2 500 Hz
63. (a) 3.29 m/s (b) The bat will be able to catch the insect because the bat is traveling at a higher speed in the same direction as the insect.
65. (a) 0.343 m (b) 0.303 m (c) 0.383 m (d) 1.03 kHz
67. (a) 0.983° (b) 4.40°
69. 1.34×10^4 N
71. (a) 531 Hz (b) 466 Hz to 539 Hz (c) 568 Hz

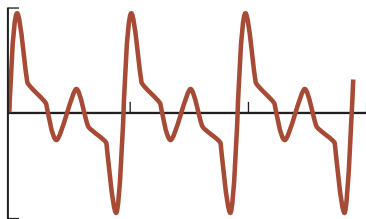
Chapter 18

Answers to Quick Quizzes

1. (c)
2. (i) (a) (ii) (d)
3. (d)
4. (b)
5. (c)

Answers to Odd-Numbered Problems

- 5.66 cm
- 3. (a) 1.65 cm (b) 6.02 cm (c) 1.15 cm
- 5. 91.3°
 - (a) : positive direction; : negative direction
 - (b) 0.750 s (c) 1.00 m
- 9. (a) 9.24 m (b) 600 Hz
- 11. (a) 156° (b) 0.058 4 cm
- 13. (c) Yes; the limiting form of the path is two straight lines through the origin with slope 0.75.
- 15. (a) 15.7 m (b) 31.8 Hz (c) 500 m/s
- 17. (a) 4.24 cm (b) 6.00 cm (c) 6.00 cm (d) 0.500 cm, 1.50 cm, 2.50 cm
- 19. at 0.089 1 m, 0.303 m, 0.518 m, 0.732 m, 0.947 m, and 1.16 m from one speaker
- 21. 19.6 Hz
- 23. (a) 163 N (b) 660 Hz
- 25. (a) second harmonic (b) 74.0 cm (c) 3
- 27. (a) 350 Hz (b) 400 kg
- 29. 1.86 g
- 31. (a) 3.8 cm (b) 3.85%
- 33. (a) three loops (b) 16.7 Hz (c) one loop
- 35. (a) 3.66 m/s (b) 0.200 Hz
- 37. 57.9 Hz
- 39. (a) 0.357 m (b) 0.715 m
- 41. (a) 0.656 m (b) 1.64 m
- 43. (a) 349 m/s (b) 1.14 m
- 45. (a) 0.195 m (b) 841 Hz
- 47. (0.252 m) with 1, 2, 3, . . .
- 49. 158 s
- 51. (a) 50.0 Hz (b) 1.72 m
- 53. (a) 21.5 m (b) seven
- 55. (a) 1.59 kHz (b) odd-numbered harmonics (c) 1.11 kHz
- 57. 5.64 beats/s
- 59. (a) 1.99 beats/s (b) 3.38 m/s
- 61. The following coefficients are approximate: 100, 156, 62, 104, 52, 29, 25.



- 63. 31.1 N
- 65. 800 m
- 67. 1.27 cm
- 69. 262 kHz
- 71. (a) 45.0 or 55.0 Hz (b) 162 or 242 N
- 73. (a) 0.078 2 — (b) 3 (c) 0.078 2 m
 - (d) The sphere floats on the water.
- 75. (a) 34.8 m/s (b) 0.986 m
- 77. 3.85 m/s away from the station or 3.77 m/s toward the station
- 79. 283 Hz
- 81. 407 cycles
- 83. (b) 11.2 m, 63.4°

- 85. (a) 78.9 N (b) 211 Hz
- 87. 15Mg

Chapter 19

Answers to Quick Quizzes

- (c)
- 2. (c)
- 3. (c)
- 4. (c)
- 5. (a)
- 6. (b)

Answers to Odd-Numbered Problems

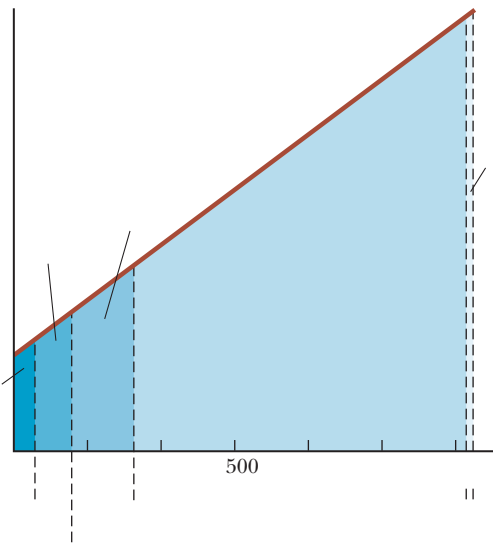
- (a) 106.7°F (b) Yes; the normal body temperature is 98.6°F, so the patient has a high fever and needs immediate attention.
- 3. (a) 109°F, 195 K (b) 98.6°F, 310 K
- 5. (a) 320°F (b) 77.3 K
 - (a) 270°C (b) 1.27 atm, 1.74 atm
- 9. (a) 0.176 mm (b) 8.78 m (c) 0.093 0 cm
- 11. 3.27 cm
- 13. 1.54 km. The pipeline can be supported on rollers. -shaped loops can be built between straight sections. They bend as the steel changes length.
- 15. (a) 0.109 cm (b) increase
- 17. (a) 437°C (b) 2.1 °C (c) No; aluminum melts at 660°C (Table 20.2). Also, although it is not in Table 20.2, Internet research shows that brass (an alloy of copper and zinc) melts at about 900°C.
- 19. (a) 99.8 mL (b) It lies below the mark. The acetone has reduced in volume, and the flask has increased in volume.
- 21. (a) 99.4 mL (b) 2.01 L (c) 0.998 cm
- 23. (a) 11.2 kg/m (b) 20.0 kg
- 25. 1.02 gallons
- 27. 4.28 atm
- 29. (a) 2.99 mol (b) 1.80 molecules
- 31. 1.50 molecules
- 33. (a) 41.6 mol (b) 1.20 kg (c) This value is in agreement with the tabulated density.
- 35. 3.55 L
- 37. (a) 3.95 atm 400 kPa (b) 4.43 atm 449 kPa
- 39. 473 K
- 41. 3.68 cm
- 43. 1.89 MPa
- 45. 6.57
- 47. (a) 2.542 cm (b) 300°C
- 49. 1.12 atm
- 51. 3.37 cm
- 53. 0.094 2 Hz
- 55. (a) 94.97 cm (b) 95.03 cm
- 57. (b) As the temperature increases, the density decreases (assuming is positive). (c) 5 (°C)
 - (d) 2.5 (°C)
- 59. (a) 9.5 s (b) It loses 57.5 s.
- 61. (b) It assumes is much less than 1.
- 63. (a) yes, as long as the coefficients of expansion remain constant (b) The lengths and at 0°C need to satisfy 17 . Then the steel rod must be longer. With 5.00 cm, the only possibility is 14.2 cm and 9.17 cm.

65. (a) 0.34% (b) 0.48% (c) All the moments of inertia have the same mathematical form: the product of a constant, the mass, and a length squared.
67. 2.74 m
69. (a) $\frac{gP}{\rho gh}$ (b) decrease (c) — 10.3 m
73. (a) 6.17 kg/m (b) 632 N (c) 580 N (d) 192 Hz
75. No; steel would need to be 2.30 times stronger.
77. (a) (b) (2.00 %) (c) 59.4% (d) With this approach, 102 mL of turpentine spills, 2.01 L remains in the cylinder at 80.0°C, and the turpentine level at 20.0°C is 0.969 cm below the cylinder's rim.
79. 4.54 m

Chapter 20

Answers to Quick Quizzes

- (i) iron, glass, water (ii) water, glass, iron
2. The figure below shows a graphical representation of the internal energy of the system as a function of energy added. Notice that this graph looks quite different from Figure 20.3 in that it doesn't have the flat portions during the phase changes. Regardless of how the temperature is varying in Figure 20.3, the internal energy of the system simply increases linearly with energy input; the line in the graph below has a slope of 1.



3. Situation	System	Q	W	int
(a) Rapidly pumping up a bicycle tire	Air in the pump	0	+	+
(b) Pan of room-temperature water sitting on a hot stove	Water in the pan			
(c) Air quickly leaking out of a balloon	Air originally in the balloon	-	-	

4. Path A is isovolumetric, path B is adiabatic, path C is isothermal, and path D is isobaric.
5. (b)

Answers to Odd-Numbered Problems

- (a) 2.26 J (b) 2.80 steps (c) 6.99 steps
3. 23.6°C

5. 0.845 kg
1.78
9. 88.2 W
11. 29.6°C
13. (a) 1 822 J/kg °C (b) We cannot make a definite identification. It might be beryllium. (c) The material might be an unknown alloy or a material not listed in the table.
15. (a) 380 K (b) 2.04 atm
17. 2.27 km
19. 16.3°C
21. (a) 10.0 g of ice melts, 40.4°C
(b) 8.04 g of ice melts, 0°C
23. (a) 0°C (b) 114 g
25. 466 J
27. (a) (b) According to nRV , it is proportional to the square of the volume.
29. 1.18 MJ
31. Process _____ int

33. 720 J
35. (a) 0.041 0 m (b) 5.48 kJ (c) 5.48 kJ
37. (a) 7.50 kJ (b) 900 K
39. (a) 0.048 6 J (b) 16.2 kJ (c) 16.2 kJ
41. (a) 9.08 kJ (b) 9.08 kJ
43. (a) 6.45 W (b) 5.57
45. 74.8 kJ
47. 3.49
49. (a) 1.19 (b) a factor of 1.19
51. 8.99 cm
53. (a) 1.85 ft °F h/Btu (b) a factor of 1.78
55. 51.2°C
57. (a) W (b) K/s
59. (a) 6.08 J (b) 4.56
61. (a) 17.2 L (b) 0.351 L/s
63. 1.90 J/kg
65. (a) 9.31 J (b) 8.47 J (c) 8.38
67. (a) 13.0°C (b) 0.532°C/s
69. (a) 2 000 W (b) 4.46°C
71. 2.35 kg
73. (5.87)°C
75. (a) 3.16 W (b) 3.17
(c) It is 0.408% larger. (d) 5.78
77. 3.76 m/s
79. 1.44 kg
81. (a) 4.19 mm/s (b) 12.6 mm/s
83. 3.66 10.2 h

Chapter 21

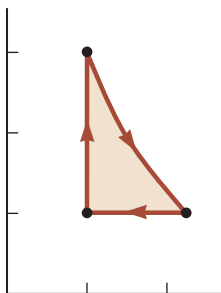
Answers to Quick Quizzes

- (i) (b) (ii) (a)
2. (i) (a) (ii) (c)
3. (d)
4. (c)

Answers to Odd-Numbered Problems

- (a) 3.54 atoms (b) 6.07 ²¹J (c) 1.35 km/s
3. (a) 0.943 N (b) 1.57 Pa
5. 3.32 mol

- 5.05 ²¹
9. (a) 4.00 u 6.64 ²⁷ kg (b) 55.9 u 9.28 kg
(c) 207 u 3.44
11. (a) 2.28 kJ (b) 6.21 ⁻²¹
13. 17.4 kPa
15. 13.5
17. (a) 3.46 kJ (b) 2.45 kJ (c) 1.01 kJ
19. 74.8 J
21. (a) 5.66 J (b) 1.12 kg
23. 2.32 ²¹
25. (a) 41.6 J/K (b) 58.2 J/K (c) 58.2 J/K, 74.8 J/K
27. (a) a factor of 0.118 (b) a factor of 2.35 (c) 0 (d) 135 J
(e) 135 J
29. 227 K
31. 25.0 kW
33. (a)



- (b) 8.77 L (c) 900 K (d) 300 K (e) 336 J
35. 132 m/s
37. (a) 2.00 ¹⁶³ 0 atoms (b) 2.70 atoms
39. (a) 2.37 K (b) 1.06
41. (b) 0.278
43. (b) 8.31 km
45. (a) 1.69 h (b) 1.00
47. (a) 367 K (b) The rms speed of nitrogen would be higher because the molar mass of nitrogen is less than that of oxygen. (c) 572 m/s
49. 5.74 Pa 56.6 atm
51. (i) (a) 100 kPa (b) 66.5 L (c) 400 K (d) 5.82 kJ
(e) 7.48 kJ (f) 1.66 kJ; (ii) (a) 133 kPa (b) 49.9 L
(c) 400 K (d) 5.82 kJ (e) 5.82 kJ (f) 0; (iii) (a) 120 kPa
(b) 41.6 L (c) 300 K (d) 0 (e) 909 J (f) 909 J;
(iv) (a) 120 kPa (b) 43.3 L (c) 312 K (d) 722 J (e) 0
(f) 722 J
53. 0.623
55. (a) 0.514 m (b) 2.06 m (c) 2.38 ¹⁰ K (d) 480 kJ
(e) 2.28 MJ
57. (a) 3.65 (b) 3.99 (c) 3.00 (d) $\frac{106}{\text{---}}$ (e) 7.98
59. (a) 300 K (b) 1.00 atm
61. (a) v_{rms} (18 ^{1/2} (4.81 ^{3/2}, where v_{rms} is in meters per second and is in meters (b) (2.08 ¹⁰ ^{5/2}, where is in seconds and is in meters (c) 0.926 mm/s and 3.24 ms (d) 1.32 m/s and 3.88
63. 0.480°C
65. (a) 0.203 mol (b) 900 K (c) 900 K (d) 15.0 L (e)
: Lock the piston in place and put the cylinder into an oven at 900 K. : Keep the gas in the oven while gradually letting the gas expand to lift the piston as far as it can. : Move the cylinder from the oven back to the 300-K room and let the gas cool and contract.

(f, g)

	,	int
	1.52	1.52
	1.67	1.67
	2.53	1.01 1.52
ABCA	0.656	0.656

67. (a) 1.09 (b) 2.69 (c) 0.529 (d) 1.00
(e) 0.199 (f) 1.01 (g) 1.25 ¹⁰⁸²
71. (a) 3.34 molecules (b) during the 27th day
(c) 2.53
73. (a) 0.510 m/s (b) 20 ms
75. 510 K and 290 K

Chapter 22

Answers to Quick Quizzes

- (i) (c) (ii) (b)
2. (d)
3. C, B, A
4. (a) one (b) six
5. (a)
6. false (The adiabatic process must be *reversible* for the entropy change to be equal to zero.)

Answers to Odd-Numbered Problems

- (a) 10.7 kJ (b) 0.533 s
3. (a) 6.94% (b) 335 J
5. (a) 0.294 (or 29.4%) (b) 500 J (c) 1.67 kW
55.4%
9. (a) 75.0 kJ (b) 7.33
11. 77.8 W
13. (a) 4.51 J (b) 2.84 J (c) 68.1 kg
15. (a) 67.2% (b) 58.8 kW
17. (a) 8.70 J (b) 3.30
19. 9.00
21. 11.8
23. 1.86
25. (a) 564°C (b) No; a real engine will always have an efficiency *less* than the Carnot efficiency because it operates in an irreversible manner.
27. (a) 741 J (b) 459 J
29. (a) 9.10 kW (b) 11.9 kJ
31. (a) 564 K (b) 212 kW (c) 47.5%
33. (a) — 1.40 $\frac{0.5}{383}$ where is in mega-watts and is in kelvins (b) The exhaust power decreases as the firebox temperature increases. (c) 1.87 MW (d) 3.84 K (e) No answer exists. The energy exhaust cannot be that small.
35. 1.17
37. (a) 244 kPa (b) 192 J
39. (a)
- | Macrostate | Microstates | Number of ways to draw |
|------------|---------------|------------------------|
| All R | RRR | |
| 2 R, 1 G | GRR, RGR, RRG | |
| 1 R, 2 G | GGR, GRG, RGG | |
| All G | GGG | |

(b)	Macrostate	Microstates	Number of ways to draw
	All R	RRRR	
	4R, 1G	GRRRR, RGRRR, RRGRR, RRRGR, RRRRG	
	3R, 2G	GGRRR, GRGRR, GRRGR, GRRRG, RGGRR, RGRGR, RGRRG, RRGGR, RRGRG, RRRGG	10
	2R, 3G	RRGGG, RGRGG, RGGRG, RGGGR, GRRGG, GRGRG, GRGGR, GRRRG, GGRGR, GGGRR	10
	1R, 4G	RGGGG, GRGGG, GGRGG, GGGRG, GGGGR	
	All G		

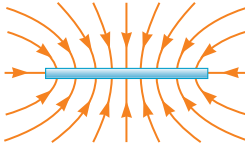
41. (a) one (b) six
 43. 143 J/K
 45. 1.02 kJ/K
 47. 57.2 J/K
 49. 0.507 J/K
 51. 195 J/K
 53. (a) 3.45 J/K (b) 8.06 J/K (c) 4.62 J/K
 55. 3.28 J/K
 57. 32.9 kJ
 59. (a) - (b) -
 61. 0.440 44.0%
 63. (a) 5.00 kW (b) 763 W
 65. (a) 0.390 (b) 0.545
 67. (a) $3nRT$ (b) $3nRT \ln 2$ (c) nRT (d) $nRT \ln 2$
 (e) $3nRT (1 \ln 2)$ (f) $2 nRT \ln 2$ (g) 0.273
 69. (a) 39.4 J (b) 65.4 rad/s 625 rev/min
 (c) 293 rad/s 2.79 rev/min
 71. 5.97 kg/s
 73. (a) 4.10 J (b) 1.42 J (c) 1.01 J
 (d) 28.8% (e) Because 80.0%, the efficiency of the cycle is much lower than that of a Carnot engine operating between the same temperature extremes.
 75. (a) 0.476 J/K (b) 417 J
 77. $\ln 3$
 79. (b) yes (c) No; the second law refers to an engine operating in a cycle, whereas this problem involves only a single process.
 81. (a) 25.0 atm, 1.97 4.13 atm,
 1.19 10 m 1.00 atm, 3.28 10 m
 6.05 atm, 5.43 (b) 2.99

Chapter 23

Answers to Quick Quizzes

- (a), (c), (e)
 2. (e)
 3. (b)
 4. (a)
 5.

Answers to Odd-Numbered Problems

- (a) 1.60 C, 1.67 ²⁷kg
 (b) 1.60 C, 3.82 kg
 (c) 1.60 C, 5.89 kg
 (d) 3.20 C, 6.65 kg
 (e) 4.80 C, 2.33 kg
 (f) 6.40 C, 2.33 kg
 (g) 1.12 C, 2.33 kg
 (h) 1.60 C, 2.99 kg
 3. 57.5 N
 5. 3.60 N downward
 2.25 N/m
 9. (a) 8.74 N (b) repulsive
 11. (a) 1.38 N (b) 77.5° below the negative axis
 13. (a) 0.951 m (b) yes, if the third bead has positive charge
 15. 0.872 N at 330°
 17. (a) 8.24 N (b) 2.19 m/s
 19. — — = — =
 21. (a) 2.16 N toward the other
 (b) 8.99 N away from the other
 23. (a) 5.58 10¹¹ N (b) 1.02 10¹¹ N
 25. (a) — 3.06 5.06 (b) — 3.06 5.06
 27. (a) — [(— —)
 (b) — [(— —)
 29. 1.82 m to the left of the 2.50- C charge
 31. (a) 1.80 N/C to the right
 (b) 8.98 N to the left
 33. 5.25
 35. (a) 0.599 2.70 kN (b) 3.00 13.5
 37. (a) 1.59 N/C (b) toward the rod
 39. (a) 6.64 N/C away from the center of the ring
 (b) 2.41 N/C away from the center of the ring
 (c) 6.39 N/C away from the center of the ring
 (d) 6.64 N/C away from the center of the ring
 41. (a) 9.35 N/C (b) 1.04 N/C (about 11% higher)
 (c) 5.15 N/C (d) 5.19 N/C (about 0.7% higher)
 43. (a) — (b) to the left
 45. (a) 2.16 N/C (b) to the left
 47. 
 49. (a) - (b) is negative, and is positive.
 51. (a) 6.13 m/s (b) 1.96 s (c) 11.7 m
 (d) 1.20
 53. 4.38 m/s for the electron; 2.39 m/s for the proton
 55. (a) $\frac{ed}{m}$ (b) in the direction of the velocity of the electron
 57. (a) 111 ns (b) 5.68 mm (c) 450 102 km/s
 59. —

61. (a) $\frac{mg}{\sin}$ (b) 3.19 N/C down the incline
63. —
65. (a) 2.18 m (b) 2.43 cm
67. (a) 1.09 C (b) 5.44
69. (a) 24.2 N (b) 4.21 8.42
71. 0.706
73. 25.9 cm
75. 1.67
77. 1.98
79. 1.14 C on one sphere and 5.69 C on the other
81. (a)
83. (a) 0.307 s (b) Yes; the downward gravitational force is not negligible in this situation, so the tension in the string depends on both the gravitational force and the electric force.
85. (a) 1.90 — (b) 3.29 —
(c) away from the origin
89. 1.36 1.96 kN
91. (a) $\frac{935}{0.0625}$ where is in newtons per coulomb and is in meters (b) 4.00 kN
(c) 0.016 8 m and 0.916 m
(d) nowhere is the field as large as 16 000 N/C

Chapter 24

Answers to Quick Quizzes

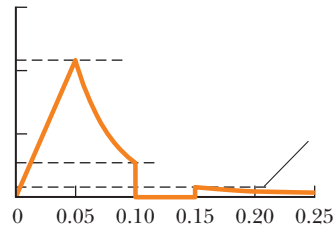
- (e)
2. (b) and (d)
3. (a)

Answers to Odd-Numbered Problems

- (a) 1.98 /C (b) 0
3. 4.14 MN/C
5. (a) 858 N /C (b) 0 (c) 657 N 28.2 N
9. (a) 6.89 MN /C (b) less than
11. for ; 0 for for ; 0 for
13. 1.77 C/m ; positive
15. (a) 339 N m /C (b) No. The electric field is not uniform on this surface. Gauss's law is only practical to use when all portions of the surface satisfy one or more of the conditions listed in Section 24.3.
17. (a) 0 (b) —
19. 18.8 kN
21. (a) — (b) —
23. 3.50 kN
25. 2.48 C/m
27. 508 kN/C up
29. (a) 0 (b) 7.19 MN/C away from the center
31. (a) 51.4 kN/C outward (b) 645 N
33. = ρ away from the axis
35. (a) 0 (b) 3.65 N/C (c) 1.46 N/C
(d) 6.49 N/C

37. (a) 0 (b) 5.39 N/C outward (c) 539 N/C outward
39. —
41. ^{glass}
43. 2.00 N
45. (a) (b) (c) — radially outward
47. (a) 0 (b) 7.99 N/C (outward)
(c) 0 (d) 7.34 N/C (outward)
49. 0.438 N
51. 8.27
53. (a) — (b) — (c) —

55.



57. (a) 4.01 nC (b) 9.57 nC (c) 4.01 nC (d) 5.56 nC
59. — radially outward

61. (a) $\frac{Cd}{24}$ to the right for /2 and to the left for /2 (b) $\frac{Cx}{2}$

63. (a) 0.269 N /C (b) 2.38
65. — radially outward
67. (a) — — (b) — —

Chapter 25

Answers to Quick Quizzes

- (i) (b) (ii) (a)
2. to to to to
3. (i) (c) (ii) (a)
4. (i) (a) (ii) (a)

Answers to Odd-Numbered Problems

- (a) 1.13 N/C (b) 1.80 ⁻¹⁴N (c) 4.37 ⁻¹⁷
3. (a) 1.52 m/s (b) 6.49 m/s
5. 260 V
(a) 38.9 V (b) the origin
9. 0.300 m/s
11. (a) 0.400 m/s (b) It is the same. Each bit of the rod feels a force of the same size as before.
13. (a) 2.12 V (b) 1.21
15. 6.93 —
17. (a) 45.0 V (b) 34.6 km/s
19. (a) 0 (b) 0 (c) 44.9 kV
21. (a) — — (b) — $\frac{qQ}{2}$
23. (a) 4.83 m (b) 0.667 m and 2.00 m
25. (a) 32.2 kV (b) 0.096 5 J

27. 8.94 J
29. —
31. (a) 10.8 m/s and 1.55 m/s (b) They would be greater. The conducting spheres will polarize each other, with most of the positive charge of one and the negative charge of the other on their inside faces. Immediately before the spheres collide, their centers of charge will be closer than their geometric centers, so they will have less electric potential energy and more kinetic energy.
33. 22.8 —
35. 2.74 27.4 fm
37. (a) 10.0 V, 11.0 V, 32.0 V
(b) 7.00 N/C in the positive direction
39. (a) xy yz
(b) 7.07 N/C
41. (a) 0 (b) —
43. 0.553 —
45. (a) — (b) $\ln \left(\frac{r}{a} \right)$
47. $2 \ln 3$
49. 1.56
51. (a) 1.35 V (b) larger sphere: 2.25 V/m (away from the center); smaller sphere: 6.74 V/m (away from the center)
53. Because π is not an integer, this is not possible. Therefore, the energy given cannot be possible for an allowed state of the atom.
55. (a) 6.00 m/s (b) 3.64 m (c) 9.00 m/s (d) 12.0 m/s
57. 253 MeV
59. (a) 30.0 cm (b) 6.67 nC (c) 29.1 cm or 3.44 cm (d) 6.79 nC or 804 pC (e) No; two answers exist for each part.
61. 702 J
63. 4.00 nC at (1.00 m, 0) and 5.01 nC at (0, 2.00 m)
65. $\ln \left(\frac{r}{a} \right)$
67. $\ln \left(\frac{r}{a} \right)$
69. (a) 4.07 kV/m (b) 488 V (c) 7.82 J (d) 306 km/s (e) 3.89 m/s toward the negative plate (f) 6.51 N toward the negative plate (g) 4.07 kV/m (h) They are the same.
71. (b) $\frac{\cos}{\sin}$ (c) yes (d) no
(e) py
(f) pxy
73. $\ln \left(\frac{r}{a} \right)$
75. (a) $\ln \left(\frac{r}{a} \right)$

(b) $\frac{dh}{\ln \left(\frac{r}{a} \right)}$

Chapter 26

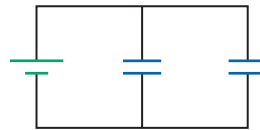
Answers to Quick Quizzes

- (d)
2. (a)
3. (a)
4. (b)
5. (a)

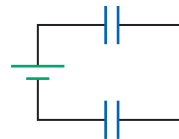
Answers to Odd-Numbered Problems

- (a) 9.00 V (b) 12.0 V
3. (a) 48.0 C (b) 6.00
5. (a) 2.69 nF (b) 3.02 kV
4.43
9. (a) 11.1 kV/m toward the negative plate (b) 98.4 nC/m (c) 3.74 pF (d) 74.8 pC
11. (a) 1.33 C/m (b) 13.4 pF
13. (a) 17.0 F (b) 9.00 V (c) 45.0 C on 5 F, 108 C on 12
15. (a) 2.81 F (b) 12.7
17. (a) in series (b) 398 F (c) in parallel; 2.20
19. (a) 3.33 F (b) 180 C on the 3.00- F and 6.00- capacitors; 120 C on the 2.00- F and 4.00- F capacitors (c) 60.0 V across the 3.00- F and 2.00- F capacitors; 30.0 V across the 6.00- F and 4.00- F capacitors
21. ten
23. (a) 5.96 F (b) 89.5 C on 20 F, 63.2 C on 6 F, and 26.3 C on 15 F and 3
25. 12.9
27. 6.00 pF and 3.00 pF
29. 19.8
31. 3.24
33. (a) 1.50 C (b) 1.83 kV
35. (a) 2.50 J (b) 66.7 V (c) 3.33 J (d) Positive work is done by the agent pulling the plates apart.

37. (a)



- (b) 0.150 J (c) 268 V
(d)



39. 9.79 kg
41. (a) 400 C (b) 2.5 kN/m
43. (a) 13.3 nC (b) 272 nC
45. (a) 81.3 pF (b) 2.40 kV
47. (a) 369 pC (b) 1.2 F, 3.1 V (c) 45.5 nJ
49. (a) 40.0 J (b) 500 V
51. 9.43 10 N

55. (a) 11.2 pF (b) 134 pC (c) 16.7 pF (d) 67.0 pC
 57. $2.51 \times 10^{-3} \text{ m}^3 = 2.51 \text{ L}$
 59. 0.188 m²
 61. (a) volume $9.09 \times 10^{-16} \text{ m}^3$, area $4.54 \times 10^{-10} \text{ m}^2$ (b) $2.01 \times 10^{-13} \text{ F}$ (c) $2.01 \times 10^{-14} \text{ C}$; 1.26×10^5 electronic charges
 63. 23.3 V across the 5.00- μF capacitor, 26.7 V across the 10.0- μF capacitor
 65. (a) $\frac{Q_0^2 d(\ell - x)}{2\epsilon_0 \ell^3}$ (b) $\frac{Q_0^2 d}{2\epsilon_0 \ell^3}$ to the right (c) $\frac{Q_0^2}{2\epsilon_0 \ell^4}$
 (d) $\frac{Q_0^2}{2\epsilon_0 \ell^4}$ (e) They are precisely the same.
 67. 4.29 μF
 69. 750 μC on C_1 , 250 μC on C_2
 71. (a) One capacitor cannot be used by itself—it would burn out. The technician can use two capacitors in series, connected in parallel to another two capacitors in series. Another possibility is two capacitors in parallel, connected in series to another two capacitors in parallel. In either case, one capacitor will be left over: upper and lower (b) Each of the four capacitors will be exposed to a maximum voltage of 45 V.
 73. $\frac{C_0}{2}(\sqrt{3} - 1)$
 75. $\frac{4}{3}C$
 77. 3.00 μF

Chapter 27

Answers to Quick Quizzes

1. (a) > (b) = (c) > (d)
 2. (b)
 3. (b)
 4. (a)
 5. $I_a = I_b > I_c = I_d > I_e = I_f$

Answers to Odd-Numbered Problems

1. 27.0 yr
 3. 0.129 mm/s
 5. 1.79×10^{16} protons
 7. (a) $0.632I_0\tau$ (b) $0.99995I_0\tau$ (c) $I_0\tau$
 9. (a) 17.0 A (b) 85.0 kA/m²
 11. (a) 2.55 A/m² (b) $5.30 \times 10^{10} \text{ m}^{-3}$ (c) $1.21 \times 10^{10} \text{ s}$
 13. 3.64 h
 15. silver ($\rho = 1.59 \times 10^{-8} \Omega \cdot \text{m}$)
 17. 8.89 Ω
 19. (a) 1.82 m (b) 280 μm
 21. (a) 13.0 Ω (b) 255 m
 23. $6.00 \times 10^{-15}(\Omega \cdot \text{m})^{-1}$
 25. 0.18 V/m
 27. 0.12
 29. 6.32 Ω
 31. (a) 3.0 A (b) 2.9 A
 33. (a) 31.5 n $\Omega \cdot \text{m}$ (b) 6.35 MA/m² (c) 49.9 mA
 (d) 658 $\mu\text{m/s}$ (e) 0.400 V
 35. 227°C
 37. 448 A
 39. (a) 8.33 A (b) 14.4 Ω
 41. 2.1 W
 43. 36.1%

45. (a) 0.660 kWh (b) \$0.072 6
 47. \$0.494/day
 49. (a) 3.98 V/m (b) 49.7 W (c) 44.1 W
 51. (a) 4.75 m (b) 340 W
 53. (a) 184 W (b) 461°C
 55. 672 s
 57. 1.1 km
 59. 15.0 h
 61. 50.0 MW
 63. (a) $\frac{Q}{4C}$ (b) $\frac{Q}{4}$ on C , $\frac{3Q}{4}$ on $3C$
 (c) $\frac{Q^2}{32C}$ in C , $\frac{3Q^2}{32C}$ in $3C$ (d) $\frac{3Q^2}{8C}$
 65. 0.478 kg/s
 67. (a) 8.00 V/m in the positive x direction (b) 0.637 Ω
 (c) 6.28 A in the positive x direction (d) 200 MA/m²
 69. (a) 116 V (b) 12.8 kW (c) 436 W
 71. (a) $\frac{\rho}{2\pi L} \ln\left(\frac{r_b}{r_a}\right)$ (b) $\frac{2\pi L \Delta V}{l \ln(r_b/r_a)}$
 73. $4.1 \times 10^{-3} (\text{°C})^{-1}$
 75. 1.418 Ω
 77. (a) $\frac{\epsilon_0 \ell}{2d}(\ell + 2x + \kappa \ell - 2\kappa x)$
 (b) $\frac{\epsilon_0 \ell v \Delta V(\kappa - 1)}{d}$ clockwise
 79. 2.71 M Ω
 81. $(2.02 \times 10^3)^\circ\text{C}$

Chapter 28

Answers to Quick Quizzes

1. (a)
 2. (b)
 3. (a)
 4. (i) (b) (ii) (a) (iii) (a) (iv) (b)
 5. (i) (c) (ii) (d)

Answers to Odd-Numbered Problems

1. (a) 6.73 Ω (b) 1.97 Ω
 3. (a) 12.4 V (b) 9.65 V
 5. (a) 75.0 V (b) 25.0 W, 6.25 W, and 6.25 W (c) 37.5 W
 7. $\frac{7}{3}R$
 9. (a) 227 mA (b) 5.68 V
 11. (a) 1.00 k Ω (b) 2.00 k Ω (c) 3.00 k Ω
 13. (a) 17.1 Ω (b) 1.99 A for 4.00 Ω and 9.00 Ω , 1.17 A for 7.00 Ω , 0.818 A for 10.0 Ω
 15. 470 Ω and 220 Ω
 17. (a) 11.7 Ω (b) 1.00 A in the 12.0- Ω and 8.00- Ω resistors, 2.00 A in the 6.00- Ω and 4.00- Ω resistors, 3.00 A in the 5.00- Ω resistor
 19. 14.2 W to 2.00 Ω , 28.4 W to 4.00 Ω , 1.33 W to 3.00 Ω , 4.00 W to 1.00 Ω
 21. (a) 4.12 V (b) 1.38 A
 23. (a) 0.846 A down in the 8.00- Ω resistor, 0.462 A down in the middle branch, 1.31 A up in the right-hand branch (b) -222 J by the 4.00-V battery, 1.88 kJ by the 12.0-V battery (c) 687 J to 8.00 Ω , 128 J to 5.00 Ω , 25.6 J to the 1.00- Ω resistor in the center branch, 616 J to 3.00 Ω , 205 J to the 1.00- Ω resistor in the right branch

- (d) Chemical energy in the 12.0-V battery is transformed into internal energy in the resistors. The 4.00-V battery is being charged, so its chemical potential energy is increasing at the expense of some of the chemical potential energy in the 12.0-V battery. (e) 1.66 kJ
25. (a) 0.395 A (b) 1.50 V
 27. 50.0 mA from to
 29. (a) 0.714 A (b) 1.29 A (c) 12.6 V
 31. (a) 0.385 mA, 3.08 mA, 2.69 mA
 (b) 69.2 V, with at the higher potential
 33. (a) 0.492 A; 0.148 A; 0.639 A
 (b) $\frac{28.0}{12.0}$ 6.77 W, $\frac{12.0}{16.0}$ 0.261 W, $\frac{16.0}{16.0}$ 6.54 W
 35. 3.05 V, 4.57 V, 7.38 V, 1.62 V
 37. (a) 2.00 ms (b) 1.80 C (c) 1.14
 39. (a) 61.6 mA (b) 0.235 C (c) 1.96 A
 41. (a) 1.50 s (b) 1.00 s (c) 200 100 , where is in microamperes and is in seconds
 43. (a) 6.00 V (b) 8.29
 45. (a) 0.432 s (b) 6.00
 47. (a) 6.25 A (b) 750 V
 49. (a) — (b) — (c) parallel
 51. 2.22 h
 53. (a) 1.02 A down (b) 0.364 A down (c) 1.38 A up (d) 0 (e) 66.0
 55. (a) 2.00 k (b) 15.0 V (c) 9.00 V
 57. (a) 4.00 V (b) Point is at the higher potential.
 59. 87.3%
 61. 6.00 , 3.00
 63. (a) 24.1 C (b) 16.1 C (c) 16.1 mA
 65. (a) 240(1
 (b) 360(1), where in both answers, is in microcoulombs and is in milliseconds
 67. (a) 9.93 C (b) 33.7 nA (c) 335 nW (d) 337 nW
 69. (a) 470 W (b) 1.60 mm or more (c) 2.93 mm or more
 71. (a) 222 C (b) 444
 73. (a) 5.00 (b) 2.40 A
 75. (a) 0 in 3 k , 333 A in 12 k and 15 k (b) 50.0
 (c) 278 $\times 10^{-18}$, where is in microamperes and is in seconds (d) 290 ms
 77. (a) - (b) No; 2.75 , so the station is inadequately grounded.
 79. (a) - (b) 3
 81. (a) 3.91 s (b) 782
 83. 20.0 or 98.1
5. (a) the negative direction (b) the positive direction
 (c) The magnetic force is zero in this case.
 (a) 7.91 N (b) zero
 9. (a) 1.25 N (b) 7.50 m/s
 11. 20.9
 13. (a) 4.27 cm (b) 1.79
 15. (a) (b)
 17. 115 keV
 19. (a) 5.00 cm (b) 8.79 m/s
 21. 7.88
 23. 8.00
 25. 0.278 m
 27. (a) 7.66 (b) 2.68 m/s (c) 3.75 MeV
 (d) 3.13 revolutions (e) 2.57
 29. 244 kV/m
 31. 70.0 mT
 33. (a) 8.00 T (b) in the positive direction
 35. 2.88
 37. 1.07 m/s
 39. (a) east (b) 0.245 T
 41. (a) 5.78 N (b) toward the west (into the page)
 43. 2.98 N west
 45. (a) 4.0 m (b) 6.9
 47. (a) north at 48.0° below the horizontal
 (b) south at 48.0° above the horizontal (c) 1.07
 49. 9.05 m, tending to make the left-hand side of the loop move toward you and the right-hand side move away.
 51. (a) 9.98 N m (b) clockwise as seen looking down from a position on the positive axis
 53. (a) 118 m (b) 118 118
 55. 43.2
 57. (a) 9.27 (b) away from observer
 59. (a) 3.52 1.60 10^{18} N (b) 24.4°
 61. 0.588 T
 63.
 65. 39.2 mT
 67. (a) the positive direction (b) 0.696 m (c) 1.09 m (d) 54.7 ns
 69. (a) 0.713 A counterclockwise as seen from above
 71. (a) mg/Nlw (b) The magnetic field exerts forces of equal magnitude and opposite directions on the two sides of the coils, so the forces cancel each other and do not affect the balance of the system. Hence, the vertical dimension of the coil is not needed. (c) 0.261 T
 73. (a) 1.04 m (b) 1.89
 75. (a) (1.00 , where is in volts and is in teslas

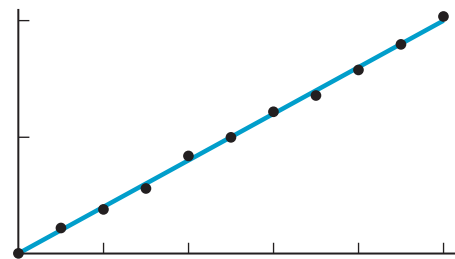
Chapter 29

Answers to Quick Quizzes

- (e)
 2. (i) (b) (ii) (a)
 3. (c)
 4. (i) (c), (b), (a) (ii) (a) (b) (c)

Answers to Odd-Numbered Problems

- Gravitational force: 8.93 N down, electric force: 1.60 N up, and magnetic force: 4.80 down.
 3. (a) into the page (b) toward the right (c) toward the bottom of the page



- (b) 0.125 mm
 77. 3.71
 79. (a) 0.128 T (b) 78.7° below the horizontal

Chapter 30

Answers to Quick Quizzes

- $B > C > A$
- (a)
- $c > a > d > b$
- $a = c = d > b = 0$
- (c)

Answers to Odd-Numbered Problems

- (a) 21.5 mA (b) 4.51 V (c) 96.7 mW
- 1.60×10^{-6} T
- (a) 28.3 μT into the page (b) 24.7 μT into the page
- 5.52 μT into the page
- (a) $2I_1$ out of the page (b) $6I_1$ into the page
- $\frac{\mu_0 I}{2r} \left(\frac{1}{\pi} + \frac{1}{4} \right)$
- 262 nT into the page
- (a) 53.3 μT toward the bottom of the page
(b) 20.0 μT toward the bottom of the page (c) zero
- $\frac{\mu_0 I}{2\pi ad} (\sqrt{d^2 + a^2} - d)$ into the page
- (a) 40.0 μT into the page (b) 5.00 μT out of the page
(c) 1.67 μT out of the page
- (a) 10 μT (b) 80 μN toward the other wire (c) 16 μT
(d) 80 μN toward the other wire
- (a) 3.00×10^{-5} N/m (b) attractive
- $-27.0\hat{i}$ μN
- 0.333 m
- (a) opposite directions (b) 67.8 A (c) It would be smaller. A smaller gravitational force would be pulling down on the wires, requiring less magnetic force to raise the wires to the same angle and therefore less current.
- (a) 200 μT toward the top of the page
(b) 133 μT toward the bottom of the page
- 5.40 cm
- (a) 4.00 m (b) 7.50 nT (c) 1.26 m (d) zero
- (a) zero (b) $\frac{\mu_0 I}{2\pi R}$ tangent to the wall (c) $\frac{\mu_0 I^2}{(2\pi R)^2}$ inward
- 20.0 μT toward the bottom of the page
- 31.8 mA
- (a) 226 μN away from the center of the loop (b) zero
- (a) 920 turns (b) 12 cm
- (a) 3.13 mWb (b) 0
- (a) 8.63×10^{45} electrons (b) 4.01×10^{20} kg
- 3.18 A
- (a) $\sim 10^{-5}$ T
(b) It is $\sim 10^{-1}$ as large as the Earth's magnetic field.
- 143 pT
- $\frac{\mu_0 I}{2\pi w} \ln \left(1 + \frac{w}{b} \right) \hat{\mathbf{k}}$
- (a) $\mu_0 \sigma v$ into the page (b) zero (c) $\frac{1}{2} \mu_0 \sigma^2 v^2$ up toward the top of the page (d) $\frac{1}{\sqrt{\mu_0 \epsilon_0}}$; we will find out in Chapter 34 that this speed is the speed of light. We will also find out in Chapter 39 that this speed is not possible for the capacitor plates.
- 1.80 mT
- 3.89 μT parallel to the xy plane and at 59.0° clockwise from the positive x direction

- (b) 3.20×10^{-13} T (c) 1.03×10^{-24} N (d) 2.31×10^{-22} N
- $B = 4.36 \times 10^{-4} I$, where B is in teslas and I is in amperes
- (a) $\frac{\mu_0 I N}{2\ell} \left[\frac{\ell - x}{\sqrt{(\ell - x)^2 + a^2}} + \frac{x}{\sqrt{x^2 + a^2}} \right]$
- $-0.0120 \hat{\mathbf{k}}$ N
- (b) $\frac{\mu_0 I}{4\pi} (1 - e^{-2\pi})$ out of the page
- (a) $\frac{\mu_0 I (2r^2 - a^2)}{\pi r (4r^2 - a^2)}$ to the left (b) $\frac{\mu_0 I (2r^2 + a^2)}{\pi r (4r^2 + a^2)}$ toward the top of the page
- (b) 5.92×10^{-8} N

Chapter 31

Answers to Quick Quizzes

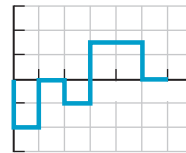
- (c)
- (c)
- (b)
- (a)
- (b)

Answers to Odd-Numbered Problems

- 0.800 mA
- (a) 101 μV tending to produce clockwise current as seen from above (b) It is twice as large in magnitude and in the opposite sense.
- 33.9 mV
- 10.2 μV
- 61.8 mV
- (a) 1.60 A counterclockwise (b) 20.1 μT (c) left
- (a) $\frac{\mu_0 I L}{2\pi} \ln \left(1 + \frac{w}{h} \right)$ (b) 4.80 μV (c) counterclockwise
- (a) 1.88×10^{-7} T \cdot m² (b) 6.28×10^{-8} V
- 272 m
- $\mathcal{E} = 0.422 \cos 120\pi t$, where \mathcal{E} is in volts and t is in seconds
- 2.83 mV
- 13.1 mV
- (a) 39.9 μV (b) The west end is positive.
- (a) 3.00 N to the right (b) 6.00 W
- (a) 0.500 A (b) 2.00 W (c) 2.00 W
- 2.80 m/s
- 24.1 V with the outer contact negative
- (a) 233 Hz (b) 1.98 mV
- 145 μA upward in the picture
- (a) 8.01×10^{-21} N (b) clockwise (c) $t = 0$ or $t = 1.33$ s
- (a) $E = 9.87 \cos 100\pi t$, where E is in millivolts per meter and t is in seconds (b) clockwise
- 13.3 V
- (a) $\mathcal{E} = 19.6 \sin 100\pi t$, where \mathcal{E} is in volts and t is in seconds (b) 19.6 V
- $\mathcal{E} = 28.6 \sin 4.00\pi t$, where \mathcal{E} is in millivolts and t is in seconds
- (a) $\Phi_B = 8.00 \times 10^{-3} \cos 120\pi t$, where Φ_B is in T \cdot m² and t is in seconds (b) $\mathcal{E} = 3.02 \sin 120\pi t$, where \mathcal{E} is in volts and t is in seconds (c) $I = 3.02 \sin 120\pi t$, where I is in amperes and t is in seconds (d) $P = 9.10 \sin^2 120\pi t$, where P is in watts and t is in seconds (e) $\tau = 0.0241 \sin^2 120\pi t$, where τ is in newton meters and t is in seconds
- (a) 113 V (b) 300 V/m

- 53. 8.80 A
- 55. 3.79 mV
- 57. (a) 43.8 A (b) 38.3 W
- 59. $7.22 \cos 1046$, where is in millivolts and is in seconds
- 61. 283 A upward
- 63. (a) 3.50 A up in 2.00 and 1.40 A up in 5.00 (b) 34.3 W (c) 4.29 N
- 65. 2.29
- 67. (a) 0.125 V clockwise (b) 0.020 0 A clockwise
- 69. (a) 97.4 nV (b) clockwise
- 71. (a) 36.0 V (b) 0.600 Wb/s (c) 35.9 V (d) 4.32 N · m
- 73. (a) NB (b) $\frac{NB}{}$ (c) _____ (d) _____ (e) clockwise (f) directed to the left.
- 75. 6.00 A
- 77. $87.1 \cos (200)$, where is in millivolts and is in seconds
- 79. 0.062 3 A in 6.00, 0.860 A in 5.00, and 0.923 A in 3.00
- 81. $\frac{Bd}{}$ mR
- 83. $\frac{MgR}{}$

- 39. (a) 8.06 MJ/m (b) 6.32 kJ
- 41. 1.00 V
- 43. (a) 18.0 mH (b) 34.3 mH (c) 9.00 mV
- 45. 781 pH
- 47. 281 mH
- 49. 400 mA
- 51. 20.0 V
- 53. (a) 503 Hz (b) 12.0 C (c) 37.9 mA (d) 72.0
- 55. (a) 135 Hz (b) 119 C (c) 114 mA
- 57. (a) 2.51 kHz (b) 69.9
- 59. (a) 0.693 — (b) 0.347 —
- 61. (a) 20.0 mV (b) 10.0, where is in mega volts and is in seconds (c) 63.2
- 63. — —
- 65. (a) 4.00 H (b) 3.50
- 67. (a) - (b) 10 H (c) 10
- 69.



- 71. 91.2
- 73. (a) 6.25 J (b) 2.00 N/m
- 75. (a) 50.0 mT (b) 20.0 mT (c) 2.29 MJ (d) 318 Pa
- 79. (a) _____ (b) 2.70
- 81. 300
- 83. _____

Chapter 32

Answers to Quick Quizzes

- (c), (f)
- 2. (i) (b) (ii) (a)
- 3. (a), (d)
- 4. (a)
- 5. (i) (b) (ii) (c)

Answers to Odd-Numbered Problems

- 19.5 mV
- 3. 100 V
- 5. 19.2
- 4.00 mH
- 9. (a) 360 mV (b) 180 mV (c) 3.00 s
- 11. $\frac{Lk}{}$
- 13. $18.8 \cos 120$, where is in volts and is in seconds
- 15. (a) 0.469 mH (b) 0.188 ms
- 17. (a) 1.00 k (b) 3.00 ms
- 19. (a) 1.29 k (b) 72.0 mA
- 21. (a) 20.0% (b) 4.00%
- 23. 92.8 V
- 25. (a) $0.500(1^{10.0})$, where is in amperes and is in seconds (b) $1.50 0.250^{10.0}$, where is in amperes and is in seconds
- 27. (a) 0.800 (b) 0
- 29. (a) 6.67 A/s (b) 0.332 A/s
- 31. (a) 5.66 ms (b) 1.22 A (c) 58.1 ms
- 33. 2.44
- 35. (a) 44.3 nJ/m (b) 995 J/m
- 37. (a) 18.0 J (b) 7.20 J

Chapter 33

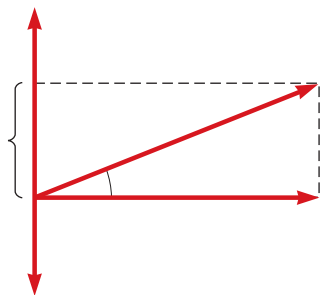
Answers to Quick Quizzes

- (i) (c) (ii) (b)
- 2. (b)
- 3. (a)
- 4. (b)
- 5. (a) (b) (c)
- 6. (c)
- (c)

Answers to Odd-Numbered Problems

- (a) 96.0 V (b) 136 V (c) 11.3 A (d) 768 W
- 3. (a) 2.95 A (b) 70.7 V
- 5. 14.6 Hz
- 3.38 W
- 9. 3.14 A
- 11. 5.60 A
- 13. (a) 12.6 (b) 6.21 A (c) 8.78 A
- 15. 0.450 Wb
- 17. 32.0 A
- 19. (a) 41.3 Hz (b) 87.5
- 21. 100 mA
- 23. (a) 141 mA (b) 235 mA

25.



27. (a) 47.1 (b) 637 (c) 2.40 k (d) 2.33 k
 (e) 14.2°
29. (a) 17.4° (b) the voltage
31. (a) 194 V (b) The current leads by 49.9°.
- 33.
35. 353 W
37. 88.0 W
39. (a) 16.0 (b) 12.0
41. $\frac{11}{14} \text{ rms}$
43. 1.82 pF
45. 242 mJ
47. (a) 0.633 pF (b) 8.46 mm (c) 25.1
49. 687 V
51. 87.5
53. 0.756
55. (a) 34% (b) 5.3 W (c) \$3.9
57. (a) 1.60 turns (b) 30.0 A (c) 25.3 A
59. (a) 22.4 V (b) 26.6° (c) 0.267 A (d) 83.9 (e) 47.2
 (f) 0.249 H (g) 2.67 W
61. 2.6 cm
63. (a) could be 53.8 or it could be 1.35 k Ω (b) capacitive reactance is 53.8 (c) must be 1.43 k
65. (b) 31.6
67. (a) 19.7 cm at 35.0° (b) 19.7 cm at 35.0°
 (c) The answers are identical. (d) 9.36 cm at 169°
69. (a) Tension and separation must be related by 274 , where is in newtons and is in meters.
 (b) One possibility is 10.9 N and 0.200 m.
71. (a) 0.225 A (b) 0.450 A
73. (a) 78.5 (b) 1.59 k (c) 1.52 k (d) 138 mA
 (e) 84.3° (f) 0.098 7 (g) 1.43 W
75. 56.7 W
77. (a) 580 H (b) 54.6 F (c) 1.00 (d) 894 Hz (e) At 200 Hz, 60.0° (out leads); at is in phase with); and at 4.00 Hz, 60.0° out lags). (f) At 200 Hz and at 4.00 Hz, 1.56 W; and at 6.25 W. (g) 0.408
79. (a) 224 s (b) 500 W (c) 221 s and 226 s
81. 58.7 Hz or 35.9 Hz. The circuit can be either above or below resonance.

Chapter 34

Answers to Quick Quizzes

- (i) (b) (ii) (c)
2. (c)
3. (c)

4. (b)
5. (a)
6. (c)
- (a)

Answers to Odd-Numbered Problems

- (a) out of the page (b) 1.85
3. (a) 11.3 GV m/s (b) 0.100 A
5. 2.87 5.75 10 m
 (a) 0.690 wavelengths (b) 58.9 wavelengths
9. (a) 681 yr (b) 8.32 min (c) 2.56 s
11. 74.9 MHz
13. 2.25 m/s
15. (a) 6.00 MHz (b) 73.4 nT
 (c) = -73.4 cos 0.126 3.77 10 , where is in nT, is in meters, and is in seconds
17. 2.9 m/s
19. (a) 0.333 T (b) 0.628 m (c) 4.77
21. 3.34 J/m
23. 3.33
25. (a) 1.19 W/m (b) 2.35
27. (a) 2.33 mT (b) 650 MW/m (c) 511 W
29. 307 W/m
31. 49.5 mV
33. (a) 332 kW/m radially inward (b) 1.88 kV/m and 222
35. 5.31 N/m
37. (a) 1.90 kN/C (b) 50.0 pJ (c) 1.67 kg m/s
39. 4.09°
41. (a) 1.60 kg each second (b) 1.60
 (c) The answers are the same. Force is the time rate of momentum transfer.
43. (a) 5.48 N (b) 913 m/s away from the Sun (c) 10.6 days
45. (a) 134 m (b) 46.8 m
47. 56.2 m
49. (a) away along the perpendicular bisector of the line segment joining the antennas (b) along the extensions of the line segment joining the antennas
51. (a) 6.00 pm (b) 7.49 cm
53. (a) 4.16 m to 4.54 m (b) 3.41 m to 3.66 m
 (c) 1.61 m to 1.67 m
55. (a) 3.85 W (b) 1.02 kV/m and 3.39
57. 5.50
59. (a) 3.21 W (b) 0.639 W/m
 (c) 0.513% of that from the noon Sun in January
- 61.
63. 378 nm
65. (a) 6.67 T (b) 5.31 W/m
 (c) 1.67 W (d) 5.56
67. (a) 625 kW/m (b) 21.7 kV/m (c) 72.4 T (d) 17.8 min
69. (a) 388 K (b) 363 K
71. (a) 3.92 W/m (b) 308 W
73. (a) 0.161 m (b) 0.163 m (c) 76.8 W (d) 470 W/m
 (e) 595 V/m (f) 1.98 T (g) 119 W
75. (a) The projected area is , where is the radius of the planet. (b) The radiating area is 4 . (c) 1.61
77. (a) 584 nT (b) 419 m (c) 1.26
 (d) vibrates in the plane. (e) 40.6
 (f) 271 nPa (g) 407 nm
79. (a) 22.6 h (b) 30.6 s

Chapter 35

Answers to Quick Quizzes

- (d)
- Beams ② and ④ are reflected; beams ③ and ⑤ are refracted.
- (c)
- (c)
- (i) (b) (ii) (b)

Answers to Odd-Numbered Problems

- (a) 2.07×10^3 eV (b) 4.14 eV
- 114 rad/s
- (a) 4.74×10^{14} Hz (b) 422 nm (c) 2.00×10^8 m/s
- 22.5°
- (a) 1.81×10^8 m/s (b) 2.25×10^8 m/s
(c) 1.36×10^8 m/s
- (a) 29.0° (b) 25.8° (c) 32.0°
- 86.8°
- 158 Mm/s
- (a) $\theta_{1i} = 30^\circ$, $\theta_{1r} = 19^\circ$, $\theta_{2i} = 41^\circ$, $\theta_{2r} = 77^\circ$ (b) First surface: $\theta_{\text{reflection}} = 30^\circ$; second surface: $\theta_{\text{reflection}} = 41^\circ$
- $\sim 10^{-11}$ s, $\sim 10^3$ wavelengths
- (a) 1.94 m (b) 50.0° above the horizontal
- 27.1 ns
- (a) 2.0×10^8 m/s (b) 4.74×10^{14} Hz (c) 4.2×10^{-7} m
- 3.39 m
- (a) 41.5° (b) 18.5° (c) 27.5° (d) 42.5°
- 23.1°
- 1.22
- $\tan^{-1}(n_g)$
- 0.314°
- 4.61°
- 62.5°
- 27.9°
- 67.1°
- 1.000 07
- (a) $\frac{nd}{n-1}$ (b) $R_{\min} \rightarrow 0$. Yes; for very small d , the light strikes the interface at very large angles of incidence. (c) R_{\min} decreases. Yes; as n increases, the critical angle becomes smaller. (d) $R_{\min} \rightarrow \infty$. Yes; as $n \rightarrow 1$, the critical angle becomes close to 90° and any bend will allow the light to escape. (e) 350 μm
- 48.5°
- 2.27 m
- 25.7°
- (a) 0.042 6 or 4.26% (b) no difference
- (a) 334 μs (b) 0.014 6%
- 77.5°
- 2.00 m
- 27.5°
- 3.79 m
- 7.93°
- $\sin^{-1} \left[\frac{L}{R^2} (\sqrt{n^2 R^2 - L^2} - \sqrt{R^2 - L^2}) \right]$ or
 $\sin^{-1} \left[n \sin \left(\sin^{-1} \frac{L}{R} - \sin^{-1} \frac{L}{nR} \right) \right]$
- (a) 38.5° (b) 1.44
- (a) 53.1° (b) $\theta_1 \geq 38.7^\circ$
- (a) 1.20 (b) 3.40 ns

- (a) 0.172 mm/s (b) 0.345 mm/s (c) and (d) northward and downward at 50.0° below the horizontal.

81. 62.2%

- (a) $\left(\frac{4x^2 + L^2}{L} \right) \omega$ (b) 0 (c) $L\omega$ (d) $2L\omega$ (e) $\frac{\pi}{8\omega}$

87. 70.6%

Chapter 36

Answers to Quick Quizzes

- false
- (b)
- (b)
- (d)
- (a)
- (b)
- (a)
- (c)

Answers to Odd-Numbered Problems

- 89.0 cm
- (a) younger (b) $\sim 10^{-9}$ s younger
- (a) $p_1 + h$, behind the lower mirror (b) virtual (c) upright (d) 1.00 (e) no
- (a) 1.00 m behind the nearest mirror (b) the palm (c) 5.00 m behind the nearest mirror (d) the back of her hand (e) 7.00 m behind the nearest mirror (f) the palm (g) All are virtual images.
- (i) (a) 13.3 cm (b) real (c) inverted (d) -0.333
(ii) (a) 20.0 cm (b) real (c) inverted (d) -1.00 (iii) (a) ∞ (b) no image formed (c) no image formed (d) no image formed
- (a) -12.0 cm; 0.400 (b) -15.0 cm; 0.250 (c) both upright
- (a) -7.50 cm (b) upright (c) 0.500 cm
- 3.33 m from the deepest point in the niche
- 0.790 cm
- (a) 0.160 m (b) -0.400 m
- (a) convex (b) at the 30.0-cm mark (c) -20.0 cm
- (a) 15.0 cm (b) 60.0 cm
- (a) concave (b) 2.08 m (c) 1.25 m from the object
- (a) 25.6 m (b) 0.058 7 rad (c) 2.51 m (d) 0.023 9 rad (e) 62.8 m
- (a) 45.1 cm (b) -89.6 cm (c) -6.00 cm
- (a) 1.50 m (b) 1.75 m
- 4.82 cm
- 8.57 cm
- 1.50 cm/s
- (a) 6.40 cm (b) -0.250 (c) converging
- (a) 39.0 mm (b) 39.5 mm
- 20.0 cm
- (a) 20.0 cm from the lens on the front side (b) 12.5 cm from the lens on the front side (c) 6.67 cm from the lens on the front side (d) 8.33 cm from the lens on the front side
- 2.84 cm
- (a) 16.4 cm (b) 16.4 cm
- (a) 1.16 mm/s (b) toward the lens
- 7.47 cm in front of the second lens, 1.07 cm, virtual, upright
- 21.3 cm

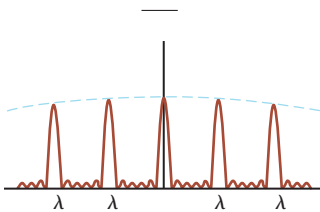
- 57. 2.18 mm away from the CCD
- 59. (a) 42.9 cm (b) 2.33 diopters
- 61. 23.2 cm
- 63. (a) -0.67 diopters (b) 0.67 diopters
- 65. (a) Yes, if the lenses are bifocal.
(b) 56.3 cm, 1.78 diopters (c) 1.18 diopters
- 67. 575
- 69. 3.38 min
- 71. (a) 267 cm (b) 79.0 cm
- 73. 40.0 cm
- 75. (a) 1.50 (b) 1.90
- 77. (a) 160 cm to the left of the lens (b) 0.800 (c) inverted
- 79. (a) 32.1 cm to the right of the second surface (b) real
- 81. (a) 25.3 cm to the right of the mirror (b) virtual
(c) upright (d) 8.05
- 83. (a) 1.40 kW/m (b) 6.91 mW/m (c) 0.164 cm
(d) 58.1 W/m
- 87. 8.00 cm
- 89. 11.7 cm
- 91. (a) 1.50 m in front of the mirror (b) 1.40 cm
(a) 0.334 m or larger (b) 0.025 5 or larger
- 95. (a) 1.99 (b) 10.0 cm to the left of the lens (c) 2.50
(d) inverted
- 97. and

Chapter 37

Answers to Quick Quizzes

(c)

- 2. The graph is shown here. The width of the primary maxima is slightly narrower than the 5 primary width but wider than the 10 primary width. Because 6, the secondary maxima are $\frac{1}{36}$ as intense as the primary maxima.



3. (a)

Answers to Odd-Numbered Problems

- 641
- 3. 632 nm
- 5. 1.54 mm
2.40
- 9. (a) 2.62 mm (b) 2.62 mm
- 11. Maxima at 0°, 29.1°, and 76.3°; minima at 14.1° and 46.8°
- 13. (a) 55.7 m (b) 124 m
- 15. 0.318 m/s
- 17. 148 m
- 21. (a) 1.93 m (b) 3.00
(c) It corresponds to a maximum. The path difference is an integer multiple of the wavelength.
- 23. 0.968
- 25. 48.0
- 27. (a) 1.29 rad (b) 99.6 nm

- 29. (a) 7.95 rad (b) 0.453
- 31. 512 nm
- 33. 0.500 cm
- 35. 290 nm
- 37. 8.70
- 39. 1.31
- 41. 1.20 mm
- 43. 1.001
- 45. 1.25 m
- 47. 1.62 cm
- 49. 78.4
- 51. _____
ters and 0, 1, $\frac{650}{48}$, 1, 2, 2, 3, 3, . are in nanome
- 53. _____
- 55. 5.00 5.00 km
- 57. 2.50 mm
- 59. 113
- 61. (a) 72.0 m (b) 36.0 m
- 63. (a) 70.6 m (b) 136 m
- 65. (a) 14.7 m (b) 1.53 cm (c) 16.0 m
- 67. 0.505 mm
- 69. 3.58°
- 71. 115 nm
- 73. (a) _____ (b) 266 nm
- lambda
- 75. 0.498 mm

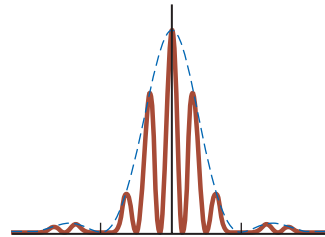
Chapter 38

Answers to Quick Quizzes

- (a)
- 2. (i)
- 3. (b)
- 4. (a)
- 5. (c)
- 6. (b)
(c)

Answers to Odd-Numbered Problems

- (a) 1.1 m (b) 1.7 mm
- 3. (a) four (b) 28.7°, 73.6°
- 5. 91.2 cm
2.30
- 9.



- 11. 1.62
- 13. 462 nm
- 15. 2.10 m
- 17. 0.284 m
- 19. 30.5 m
- 21. 0.40 rad
- 23. 16.4 m

25. 1.81
 27. (a) three (b) 0° , 45.2° , 45.2°
 29. 74.2 grooves/mm
 31.
 33. 514 nm
 35. (a) 3.53 rulings/cm (b) 11
 37. (a) 5.23 m (b) 4.58
 39. 0.093 4 nm
 41. (a) 0.109 nm (b) four
 43. (a) 54.7° (b) 63.4° (c) 71.6°
 45. 0.375
 47. (a) six (b) 7.50°
 49. 60.5°
 51. 6.89 units
 53. (a) 0.045 0 (b) 0.016 2
 55. 5.51 m, 2.76 m, 1.84 m
 57. 632.8 nm
 59. (a) 7.26 rad, 1.50 arc seconds (b) 0.189 ly (c) 50.8 rad (d) 1.52 mm
 61. (a) 25.6° (b) 18.9°
 63. 545 nm
 65. 13.7°
 67. 15.4
 69. (b) 3.77 nm/cm
 71. (a) 4.49 compared with the prediction from the approximation of 1.5 4.71 (b) 7.73 compared with the prediction from the approximation of 2.5 7.85
 73. (b) 0.001 90 rad 0.109°
 75. (b) 15.3
 77. (a) 41.8° (b) 0.592 (c) 0.262 m

Chapter 39

Answers to Quick Quizzes

- (c)
 2. (d)
 3. (d)
 4. (a)
 5. (a)
 6. (c)
 (d)
 8. (i) (c) (ii) (a)
 9. (a) (b) (c)

Answers to Odd-Numbered Problems

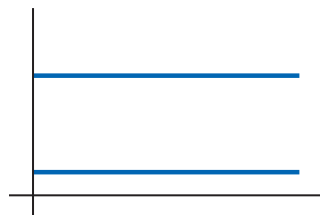
- 10.0 m/s toward the left in Figure P39.1
 3. 5.70 degrees or 9.94 rad
 5. 0.917
 0.866
 9. 0.866
 11. 0.220
 13. 5.00 s
 15. The trackside observer measures the length to be 31.2 m, so the supertrain is measured to fit in the tunnel, with 18.8 m to spare.
 17. (a) 25.0 yr (b) 15.0 yr (c) 12.0 ly
 19. 0.800
 21. (b) 0.050 4
 23. (c) 2.00 kHz (d) 0.075 m/s 0.17 mi/h
 25. 1.55 ns
 27. (a) 2.50 m/s (b) 4.98 m (c) 1.33

29. (a) 17.4 m (b) 3.30°
 31. Event B occurs first, 444 ns earlier than A
 33. 0.357
 35. 0.998 toward the right
 37. (a) — 0.943 2.83 m/s
 (b) The result would be the same.
 39. (a) 929 MeV/ (b) 6.58 MeV/ (c) No
 41. 4.51
 43. 0.285
 45. (a) 3.07 MeV (b) 0.986
 47. (a) 938 MeV (b) 3.00 GeV (c) 2.07 GeV
 49. (a) 5.37 335 MeV
 (b) 1.33 8.31 GeV
 51. 1.63 MeV/
 53. (a) smaller (b) 3.18 kg
 (c) It is too small a fraction of 9.00 g to be measured.
 55. 4.28 kg/s
 57. (a) 8.63 J (b) 9.61
 59. (a) 0.979 (b) 0.065 2 (c) 15.0
 (d) 0.999 999 97 ; 0.948 ; 1.06
 61. (a) 4.08 MeV (b) 29.6 MeV
 63. 2.97
 65. (a) 2.66 m (b) 3.87 km/s (c) 8.35
 (d) 5.29 (e) 4.46
 67. 0.712%
 69. (a) 13.4 m/s toward the station and 13.4 m/s away from the station. (b) 0.056 7 rad/s
 71. (a) 1.12 (b) 6.00 ²⁷
 (c) \$2.17
 73. (a) 21.0 yr (b) 14.7 ly (c) 10.5 ly (d) 35.7 yr
 75. (a) 6.67 (b) 1.97 h
 77. (a) or 10 s (b)
 79. (a) 0.905 MeV (b) 0.394 MeV
 (c) 0.747 MeV/ 3.99 kg m/s (d) 65.4°
 81. (b) 1.48 km
 83. (a) 0.946 (b) 0.160 ly (c) 0.114 yr (d) 7.49
 85. (a) 229 s (b) 174 s
 87. 1.83
 91. (a) 0.800 (b) 7.51 s (c) 1.44 m (d) 0.385
 (e) 4.88

Chapter 40

Answers to Quick Quizzes

- (b)
 2. Sodium light, microwaves, FM radio, AM radio.
 3. (c)
 4. The classical expectation (which did not match the experiment) yields a graph like the following drawing:



5. (d)
 6. (c)

- (b)
- 8. (a)

Answers to Odd-Numbered Problems

- 6.85 m, which is in the infrared region of the spectrum
- 3. (a) lightning: m; explosion: m (b) lightning: ultraviolet; explosion: x-ray and gamma ray
- 5. 5.71 photons/s
(a) 2.99 K (b) 2.00
- 9. 5.18
- 11. 1.30 photons/s
- 13. (a) 0.263 kg (b) 1.81 W (c) 0.015 3°C/s 0.919°C/min
(d) 9.89 m (e) 2.01 J (f) 8.99 photon/s
- 15. 1.34³¹
- 17. (a) 295 nm, 1.02 PHz (b) 2.69 V
- 19. (a) 1.89 eV (b) 0.216 V
- 21. (a) 1.38 eV (b) 3.34
- 23. 8.34
- 25. 1.04
- 27. 22.1 keV/ = 478 eV
- 29. 70.0°
- 31. (a) 43.0° (b) 0.601 MeV; 0.601 MeV/ 3.21 kg m/s (c) 0.279 MeV; 0.279 MeV/ 3.21 kg m/s
- 33. (a) 4.89 nm (b) 268 keV (c) 31.8 keV
- 35. (a) 0.101 nm (b) 80.8°
- 37. To have photon energy 10 eV or greater, according to this definition, ionizing radiation is the ultraviolet light, x-rays, and rays with wavelength shorter than 124 nm; that is, with frequency higher than 2.42 Hz.
- 39. (a) 1.66²⁷ kg m/s (b) 1.82 km/s
- 41. (a) 14.8 keV or, ignoring relativistic correction, 15.1 keV (b) 124 keV
- 43. 0.218 nm
- 45. (a) 3.91 10 (b) 20.0 GeV/ 1.07 10 kg m/s (c) 6.20 m (d) The wavelength is two orders of magnitude smaller than the size of the nucleus.
- 47. (a) $\frac{\gamma - 1}{\gamma + 1}$ where $\gamma = \frac{1}{\sqrt{1 - v^2/c^2}}$ (b) 1.60 (c) no change (d) 2.00 (e) 1 (f)
- 49. (a) phase —
(b) This is different from the speed at which the particle transports mass, energy, and momentum.
- 51. (a) 989 nm (b) 4.94 mm (c) No; there is no way to identify the slit through which the neutron passed. Even if one neutron at a time is incident on the pair of slits, an interference pattern still develops on the detector array. Therefore, each neutron in effect passes through both slits.
- 53. 105 V
- 55. within 1.16 mm for the electron, 5.28 m for the bullet
- 57.
- 61. 1.36 eV
- 63. (a) 19.8 m (b) 0.333 m
- 65. (a) 1.7 eV (b) 4.2 s (c) 7.3
- 67. (a) 2.82 m (b) 1.06 J (c) 2.87
- 69. (a) 8.72 10¹⁶ $\frac{\text{electrons}}{\text{cm}}$ (b) 14.0 mA/cm

(c) The actual current will be lower than that in part (b).

- 71. (a) 0.143 nm (b) This is the same order of magnitude as the spacing between atoms in a crystal (c) Because the wavelength is about the same as the spacing, diffraction effects should occur.
- 73. (a) The Doppler shift increases the apparent frequency of the incident light. (b) 3.86 eV (c) 8.76 eV

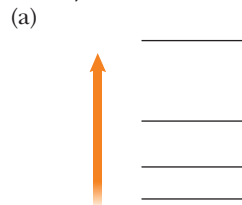
Chapter 41

Answers to Quick Quizzes

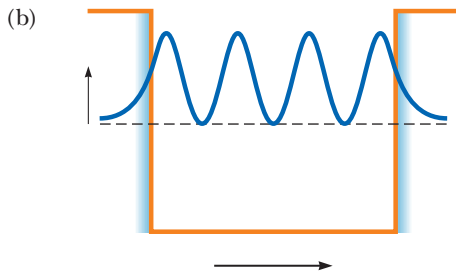
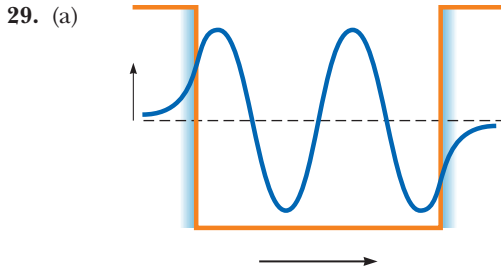
- (d)
- 2. (i) (a) (ii) (d)
- 3. (c)
- 4. (a), (c), (f)

Answers to Odd-Numbered Problems

- (a) 126 pm (b) 5.27 kg m/s (c) 95.3 eV
- 3. (a) (b) 0.037 0 (c) 0.750
- 5. (a) 0.511 MeV, 2.05 MeV, 4.60 MeV (b) They do; the MeV is the natural unit for energy radiated by an atomic nucleus.



- (b) 2.20 nm, 2.75 nm, 4.12 nm, 4.71 nm, 6.59 nm, 11.0 nm
- 9. 0.795 nm
- 11. (a) 6.14 MeV (b) 202 fm (c) gamma ray
- 13. (a) 0.434 nm (b) 6.00 eV
- 15. (a) (15)^{1/2} (b) 1.25
- 17. (a) — (b) 0.409
- 19. (a) — (b) 5.26 (c) 3.99
(d) In the 2 graph in the text's Figure 41.4b, it is more probable to find the particle either near /4 or /4 than at the center, where the probability density is zero. Nevertheless, the symmetry of the distribution means that the average position is /2.
- 21. (a) 0.196 (b) The classical probability is 0.333, which is significantly larger. (c) 0.333 for both classical and quantum models
- 23. (a) 0.196 (b) 0.609
- 25. (b) —
- 27. (a) $\frac{mL}{\hbar}$ —
(b)



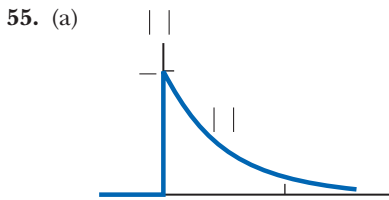
31. (a) 0.010 3 (b) 0.990
 33. 85.9
 35. 3.92%
 37. 600 nm

39. (a) — (b) —

43. (a) 2.00 m (b) 3.31 kg m/s (c) 0.171 eV
 45. 0.250
 47. (a) 0.903 (b) 0.359 (c) 0.417 (d) $10^{6.59}$
 49. (a) 435 THz (b) 689 nm (c) 165 peV or more

51. (a) — (b) -

53. (a) $\frac{nhc}{mc}$ mc (b) 4.68
 (c) 28.6% larger



- (b) 0 (d) 0.865

57. (a) 0 (b) 0 (c) — —

59. (b) 0.092 0 (c) 0.908
 61. (a) 0.200 (b) 0.351 (c) 0.376 eV (d) 1.50 eV

63. (a) - (b) 0 (c) = ± — (d) —

- (e) 0 (f) —

Chapter 42

Answers to Quick Quizzes

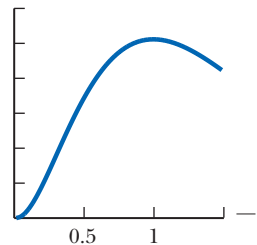
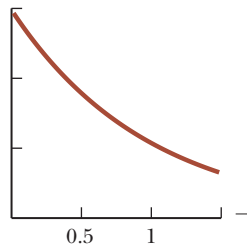
- (c)
 2. (a)
 3. (b)
 4. (a) five (b) nine
 5. (c)
 6. true

Answers to Odd-Numbered Problems

- (a) 121.5 nm, 102.5 nm, 97.20 nm (b) ultraviolet
 3. 1.94
 5. (a) 5 (b) no (c) no
 (a) 5.69 m (b) 11.3 N
 9. (a) 13.6 eV (b) 1.51 eV
 11. (a) 0.968 eV (b) 1.28 m (c) 2.34
 13. (a) 2.19 m/s (b) 13.6 eV (c) 27.2 eV
 15. (a) 2.89 kg · m /s (b) 2.74 (c) 7.30
 17. (a) 0.476 nm (b) 0.997 nm
 19. (a) 3 (b) 520 km/s
 21. (a) 54.4 eV/ for 1, 2, 3, .



- (b) 54.4 eV
 23. (b) 0.179 nm
 25.



27.
 29. 797
 31.
 33. (a) $2.58 \cdot 10^{34}$ J
 (b) $3.65 \cdot 10^{34}$ J

35. —
 37. — $2.58 \times 10^{34} \text{ J}$
 39. 3; 2; 2, 1, 0, 1, or 2; 1; 1, 0, or 2
 41. (a) 1
 (b) $\frac{\ell}{\epsilon}$

43. aluminum
 45. (a) 30 (b) 36
 47. 18.4 T
 49. 17.7 kV
 51. (a) 14 keV (b) 8.8
 53. (a) If 2, then 2, 1, 0, 1, 2; if 1, then 1, 0, 1; if 0, then 0. (b) 6.05 eV
 55. 0.068 nm
 57. gallium
 59. (a) 28.3 THz (b) 10.6 m (c) infrared
 61. 3.49 photons
 63. (a) 4.24 W/m (b) 1.20
 65. (a) 3.40 eV (b) 0.136 eV
 67. (a) 1.57 $^{3/2}$ (b) 2.47 28
 (c) 8.69
 69. 9.80 GHz
 71. between 10 K and 10 K; use Equation 21.19 and set the kinetic energy equal to typical ionization energies
 73. —, no
 75. (a) 609 eV (b) 6.9 eV (c) 147 GHz (d) 2.04 mm
 77. — 0.866
 79. (a) 486 nm (b) 0.815 m/s
 81. (a) — —
 (b) — —
 (c) 0, —, and (d) —
 (e) — where 0.191
 83. (a) 4.20 mm (b) 1.05 photons
 (c) 8.84
 85. —
 mL
 87. 0.125

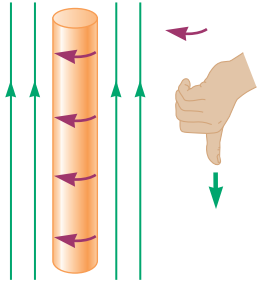
89. (a) 0.106, where is in nanometers and 1, 2, 3, . . . (b) $= -\frac{6.80}{}$ where is in electron volts and 1, 2, 3, . . .
 91. The classical frequency is 4

Chapter 43

Answers to Quick Quizzes

- (a) van der Waals (b) ionic (c) hydrogen (d) covalent
 2. (c)
 3. (a)
 4. A: semiconductor; B: conductor; C: insulator

Answers to Odd-Numbered Problems

- 10 K
 3. 4.3 eV
 5. (a) 74.2 pm (b) 4.46 eV
 (a) $1.46 \times 10^{46} \text{ kg m}$ (b) The results are the same, suggesting that the molecule's bond length does not change measurably between the two transitions.
 9. 9.77 rad/s
 11. (a) 0.014 7 eV (b) 84.1
 13. (a) 12.0 pm (b) 9.22 pm
 15. (a) 2.32 kg (b) 1.82 kg (c) 1.62 cm
 17. (a) 0, 3.62 eV, 1.09 eV
 (b) 0.097 9 eV, 0.294 eV, 0.490 eV
 19. (a) 472 m (b) 473 m (c) 0.715
 21. (a) 4.60 kg (b) 1.32 Hz (c) 0.074 1 nm
 23. 6.25
 25. 7.83 eV
 27. 5.28 eV
 29.
 31. (a) 4.23 eV (b) 3.27
 33. (a) 2.54 28 (b) 3.15 eV
 35. 0.939
 41. (a) 276 THz (b) 1.09
 43. 1.91 eV
 45. 227 nm
 47. (a) 59.5 mV (b) 59.5 mV
 49. 4.18 mA
 51. (a)  (b) 10.7 kA

53. 203 A to produce a magnetic field in the direction of the original field
 55.

57. 5.24 J/g
 61. (a) 0.350 nm (b) 7.02 eV (c) 1.20
 63. (a) 6.15 Hz (b) 1.59 ⁴⁶kg
 (c) 4.78 m or 4.96

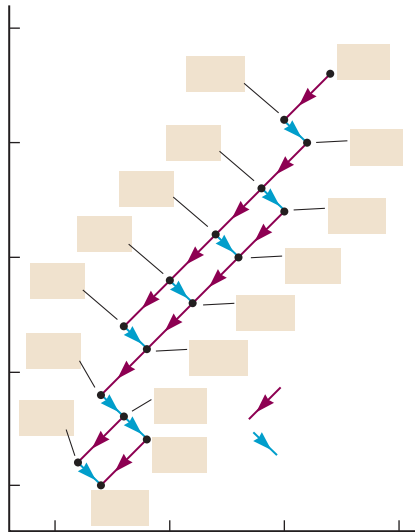
Chapter 44

Answers to Quick Quizzes

- (i) (b) (ii) (a) (iii) (c)
 2. (e)
 3. (b)
 4. (c)

Answers to Odd-Numbered Problems

- (a) 1.5 fm (b) 4.7 fm (c) 7.0 fm (d) 7.4 fm
 3. (a) 455 fm (b) 6.05 m/s
 5. (a) 4.8 fm (b) 4.7 (c) 2.3 kg/m
 16 km
 9. 8.21 cm
 11. (a) 27.6 N (b) 4.16 ²⁷m/s (c) 1.73 MeV
 13. 6.1 N toward each other
 15. (a) 1.11 MeV (b) 7.07 MeV (c) 8.79 MeV (d) 7.57 MeV
 17. greater for N by 3.54 MeV
 19. (a) ¹³⁹Cs (b) ¹³⁹La (c) ¹³⁹
 21. 7.93 MeV
 23. (a) 491 MeV (b) term 1: 179%; term 2: 53.0%; term 3:
 24.6%; term 4: 1.37%
 25. 86.4 h
 27. 1.16
 29. 9.47 nuclei
 31. (a) 0.086 2 d 3.59 9.98
 (b) 2.37 nuclei (c) 0.200 mCi
 33. 1.41
 35. (a) cannot occur (b) cannot occur (c) can occur
 37. 0.156 MeV
 39. 4.27 MeV
 41. (a) e (b) 2.75 MeV
 43. (a) 148 Bq/m (b) 7.05 atoms/m (c) 2.17
 45.



47. 1.02 MeV
 49. (a) ²¹Ne (b) ¹⁴⁴Xe (c) e
 51. 8.005 3 u; 10.013 5 u

53. (a) 29.2 MHz (b) 42.6 MHz (c) 2.13 kHz
 55. 46.5 d
 57. (a) 2.7 fm (b) 1.5 N (c) 2.6 MeV
 (d) 7.4 fm; 3.8 N; 18 MeV
 59. 2.20
 61. (a) smaller (b) 1.46 u (c) 1.45 % (d) no
 63. (a) 2.52 (b) 2.29 Bq (c) 1.07
 65. 5.94 Gyr
 67. (b) 1.95
 69. 0.401%
 71. (a) Mo (b) electron capture: all levels; e emission:
 only 2.03 MeV, 1.48 MeV, and 1.35 MeV
 73. (b) 1.16 u
 75. 2.66 d

Chapter 45

Answers to Quick Quizzes

- (b)
 2. (a), (b)
 3. (a)
 4. (d)

Answers to Odd-Numbered Problems

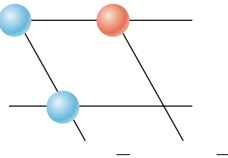
- 1.1 fissions
 3. ¹⁴⁴Xe, ¹⁴³Xe, and ¹⁴²
 5. ²³²Th Th; Th Pa
 Pa
 126 MeV
 9. 184 MeV
 11. 5.58
 13. 2.68
 15. 26 MeV
 17. (a) 3.08 g (b) 1.31 mol (c) 7.89 ³¹nuclei
 (d) 2.53 ²¹J (e) 5.34 yr (f) Fission is not sufficient
 to supply the entire world with energy at a price of \$130
 or less per kilogram of uranium.
 19. 1.01 g
 21. (a) Be (b) C (c) 7.27 MeV
 23. 5.49 MeV
 25. (a) 31.9 g/h (b) 123 g/h
 27. (a) 2.61 ³¹J (b) 5.50
 29. (a) 2.23 m/s (b)
 31. (a) 10 (b) 1.2 J/m (c) 1.8 T
 33. (a) 0.436 cm (b) 5.79 cm
 35. (a) 10.0 h (b) 3.16 m
 37. 2.39 °C, which is negligible
 39. 1.66
 41. (a) 421 MBq (b) 153 ng
 43. (a) 0.963 mm (b) It increases by 7.47%.
 45. (a) atoms (b)
 47. 1.01 MeV
 49. (a) 1.5 nuclei (b) 0.6 kg
 51. (a) 3.12 (b) 3.12 electrons
 53. (a) 1.94 MeV, 1.20 MeV, 7.55 MeV, 7.30 MeV, 1.73 MeV,
 4.97 MeV (b) 1.02 MeV (c) 26.7 MeV
 (d) Most of the neutrinos leave the star directly after their
 creation, without interacting with any other particles.
 55. 69.0 W
 57. 2.57
 59. (b) 26.7 MeV

- 61. (a) 5.67 K (b) 120 kJ
- 63. 14.0 MeV or, ignoring relativistic correction, 14.1 MeV
- 65. (a) 3.4 Ci, 16 Ci, 3.1 Ci (b) 50%, 2.3%, 47%
(c) It is dangerous, notably if the material is inhaled as a powder. With precautions to minimize human contact, however, microcurie sources are routinely used in laboratories.
- 67. (a) 8 eV (b) 4.62 MeV and 13.9 MeV
(c) 1.03 kWh
- 69. (a) 4.92 kg/h \rightarrow 4.92 /h (b) 0.141 kg/h
- 71. 4.44 kg/h
- 73. (a) 10 electrons (b) 10 (c) 10

Chapter 46

Answers to Quick Quizzes

- (a)
- 2. (i) (c), (d) (ii) (a)
- 3. (b), (e), (f)
- 4. (b), (e)
- 5. 0



- 6. false

Answers to Odd-Numbered Problems

- (a) 5.57 J (b) \$1.70
- 3. (a) 4.54 Hz (b) 6.61
- 5. 118 MeV
(b) The range is inversely proportional to the mass of the field particle. (c)
- 9. (a) 67.5 MeV (b) 67.5 MeV/ (c) 1.63
- 11. (a) muon lepton number and electron lepton number
(b) charge (c) angular momentum and baryon number
(d) charge (e) electron lepton number
- 13. (a) $^-$ (b) $^-$ (c) $^-$ (d) $^-$ (e) $^-$ (f) $^- + \nu$
- 15. (a) It cannot occur because it violates baryon number conservation. (b) It can occur. (c) It cannot occur because it violates baryon number conservation. (d) It

- can occur. (e) It can occur. (f) It cannot occur because it violates baryon number conservation, muon lepton number conservation, and energy conservation.
- 17. 0.828
- 19. (a) 37.7 MeV (b) 37.7 MeV (c) 0 (d) No. The mass of the meson is much less than that of the proton, so it carries much more kinetic energy. The correct analysis using relativistic energy conservation shows that the kinetic energy of the proton is 5.35 MeV, while that of the meson is 32.3 MeV.
- 21. (a) It is not allowed because neither baryon number nor angular momentum is conserved. (b) strong interaction (c) weak interaction (d) weak interaction (e) electromagnetic interaction
- 23. (a) K (scattering event) (b) (c)
- 25. (a) Strangeness is not conserved. (b) Strangeness is conserved. (c) Strangeness is conserved. (d) Strangeness is not conserved. (e) Strangeness is not conserved. (f) Strangeness is not conserved.
- 27. 9.25 cm
- 33. (a) (b) 0 (c) antiproton; antineutron
- 35. The unknown particle is a neutron, udd.
- 39. (a) 1.06 mm (b) microwave
- 41. (a) K (b)
- 43. 7.73
- 45. (a) 0.160 (b) 2.18
- 47. (a) 590.09 nm (b) 599 nm (c) 684 nm
- 49. 6.00
- 51. (a) Charge is not conserved. (b) Energy, muon lepton number, and electron lepton number are not conserved. (c) Baryon number is not conserved.
- 53. 0.407%
- 55.
- 59. 1.12 GeV/
- 61. (a) electron–positron annihilation; e^- (b) A neutrino collides with a neutron, producing a proton and a muon; W^-
- 63.
- 65. neutron
- 67. 5.35 MeV and 32.3 MeV
- 69. (a) 0.782 MeV (b) 0.919 382 km/s
(c) The electron is relativistic; the proton is not.
- 71. (b) 9.08 Gyr
- 73. (a) $2Nmc$ (b) ^-Nmc (c) method (a)

Index

Locator note: **boldface** indicates a definition; *italics* indicates a figure; *t* indicates a table

Aberrations, in lenses, **1112–1113**, 1113, 1121

Absolute pressure (P), **423**

Absolute temperature scale, 571–**572**, 572

conversion to/from, 572

Absolute uncertainty, **A–20**

Absolute zero, **572**

Absorption, stimulated, **1325**, 1325, 1326

Absorption spectroscopy, **1297–1298**, 1298

Absorptivity, **613**

AC. *See* Alternating current (AC)

Acceleration (a), **31–35**

average (a_{avg}), **31**, 31, 33, 34, **80**, 92, 314*t*

average angular (α_{avg}), **295**, 300

of center of mass (\vec{a}_{CM}), **272**

centripetal (a_c), 91–94, **92**, 95,

150–156, 298–299

constant

motion in one dimension with, 36, **36–40**

motion in two dimensions with, 81–84

direction of, 31, 32–33

force and, 32–33, 114, 115–117

in free fall, 41–43

instantaneous (\vec{a}), 31, **32–33**, 34, **80**

in uniform circular motion, 92

instantaneous angular (α), **295–296**,

298, 314*t*

and torque, 302–307

linear, in rolling motion, 317

mass and, 115–117

motion diagrams of, 35, 35–36

negative, **33**, 35, 36

in nonuniform circular motion,

156–158, 157

particle under constant acceleration model, 36, 36–40, **38**

in projectile motion, 84–85, 87–89

radial (a_r), 94, **94–96**, 156–158, 157

relative, 97

in relativistic conditions, 1215

in simple harmonic motion, 451, 452, 454, 455, 455–456, 463

tangential (a_t), 94, **94–95**, 156–158, 157, 298–299, 299, 303

total, 94, 95

transverse (a_y), **490–491**

in uniform circular motion, 91, 91–92, 150–156

units of, 8*t*, 31

and velocity vector, 80–81

Acceleration–time graph, 32, 32, 33, 33

Acceptor atoms, **1364**, 1364

Accommodation, **1116**, 1117

Actinium, radioactive series, 1404, 1404*t*

Action force, 119, 119

Activity, of radioactive substance, **1392**, 1393–1394

units of, 1392

Addition

associative law of, 63, 63

commutative law of, 62, 62, **181**

derivative of sum of two

functions, A–14

of fractions, A–6

significant figures in, 12

and uncertainty, A–20

of vectors, 80

component method, 67, 67–70

graphical method, 62, 62–63,

64–65

Adiabatic free expansion, **604–605**

entropy in, 672, 674, 674,

675–676, 677

as irreversible process, 659, 659–660

Adiabatic process, **604–605**, **637**

for ideal gas, 637–639, 638

Advanced LIGO, 1149

AFM. *See* Atomic force microscope (AFM)

Agricultural research, radioactive tracers in, 1435

Agua Caliente Solar Project, 1367

Air

average expansion coefficient, 575*t*

density, 419*t*

dielectric constant and dielectric strength of, 791*t*

index of refraction, 1067*t*

speed of sound in, 511–512, 512*t*

thermal conductivity, 609*t*

Air columns, standing waves in, 546–549, 547

Air conditioners, 656

Air drag. *See* Air resistance

Airplanes

acceleration in carrier landing, 38–39, 46–47

cabin pressure, 419

sonic boom, 522

wings of, 434, 434–435

Air resistance, 162, 164, 164–167

free fall and, 40–41

A Large Ion Collider Experiment (ALICE), 1465

Alcohol

average expansion coefficient, 575*t*

index of refraction, 1067*t*

latent heats of fusion and vaporization, 598*t*

specific heat, 594*t*

speed of sound in, 512*t*

Alcohol thermometers, 570–571

Algebra, review of, A–5–A–10

ALICE (A Large Ion Collider Experiment), 1465

Alkali metals, 1321

Allowed transitions, 1322, 1322

Alloys, metal, 1355

Alpha (α) decay, 1390, 1391, 1395, 1395–1399, 1399, 1400

decay pathways, 1404*t*

as example of tunneling, 1282–1283, 1283, 1399, 1399

and radiation damage, 1433, 1434*t*

Alpha rays, 1380

Alternating current (AC)

AC–DC converters, 1017, 1017, 1018, 1018–1019

advantages of, 1018

voltage of, 1001

Alternating-current (AC) circuits

applications, 998

average power in, **1011–1013**

capacitors in, 1004–1007, 1005, 1011

household wiring, 852–853, 853 electrical safety, 853–855, 854

inductors in, 1002, 1002–1004, 1003, 1011

RC circuits, as filters, 1019, 1019

- resistors in, 999, 999–1002, 1000, 1001, 1012
- RLC* circuits, series, 1007, 1007–1011, 1008
- average power in, 1011–1014, 1014
- resonance in, 1013–1015, 1014
- Alternating-current (AC) generators, 949–951, 950
- Alternating-current (AC) sources, 998–999, 999
- Alternating-current (AC) transformers, 1015, 1015–1018, 1016, 1017
- Alternative representations, 22, 22–23
- Altitude
- and atmospheric pressure, 419
 - and free-fall acceleration, 391–392, 391*t*
- Aluminum (Al)
- average expansion coefficient, 575*t*
 - density, 6
 - isotopes of, 1396*t*
 - latent heats of fusion and vaporization, 598*t*
 - resistivity, 814*t*
 - specific heat, 594*t*
 - speed of sound in, 512*t*
 - thermal conductivity, 609*t*
 - work function of, 1243*t*
- Alzheimer's disease, 1450, 1451
- Amorphous solids, 1179, 1340
- Ampere (A), 3, 809, 910
- Ampère, Andre-Marie, 912
- Ampère–Maxwell law, 1031–1032, 1033–1034, 1036–1037
- Ampère's law, 911–915, 912
- general form of (Ampère–Maxwell law), 1031–1032, 1033–1034, 1036–1037
- Amperian loop, 912
- Amplitude (A)
- of damped oscillation, 469, 469, 470, 470
 - of driven oscillator, 470, 470
 - of simple harmonic motion, 452–453, 453, 455, 456
 - of standing wave, 539
 - of wave, 487, 488, 491
- Analysis models, 28
- isolated system
 - angular momentum version, 345–350, 347
 - energy version, 215–222, 217
 - momentum version, 250–252, 251, 273
 - problem-solving strategies for, 217–218
 - nonisolated system
 - angular momentum version, 338–342, 339, 341
 - energy version, 212–215, 214–215, 313–314
 - momentum version, 252–256, 255, 273
 - problem-solving strategies for, 217–218
 - particle in a field
 - electric field, 699, 699–703, 700, 701
 - gravitational field, 392–394, 393–394
 - magnetic field, 869, 871–874, 872, 876
 - particle in equilibrium, 120–121, 121, 122–123
 - particle in simple harmonic motion, 452–458, 456
 - particle in uniform circular motion, 91, 91–94, 93, 152–156
 - particle model, 21–22, 267, 272
 - particle under a net force, 121, 121, 122, 123–130
 - particle under constant acceleration, 36, 36–40, 38
 - particle under constant speed, 30–31
 - particle under constant velocity, 28–31, 29, 30
 - quantum particle under boundary conditions, 1277–1278
 - rigid object in equilibrium, 363–365, 364
 - rigid object under a net torque, 302–307, 304–305
 - rigid object under constant angular acceleration, 296–298, 297
 - selection of, 29, 121
 - system model, 178
 - traveling wave, 487, 487–491
 - waves in interference, 534–538, 535, 537, 1137, 1137–1140, 1139
 - waves under boundary conditions, 541, 541–545, 542, 543
 - wave under reflection, 1061–1065, 1062, 1063
 - wave under refraction, 1065, 1065–1071, 1066, 1067, 1068
- Analysis of problems, 46, 47. *See also* Problem-solving strategies
- Analyzer, 1176–1177, 1177
- Anderson, Carl, 1449–1450, 1451–1452, 1455
- Andromeda galaxy, 406, 406–407
- Angle(s)
- conversion to/from polar coordinates, 60–61
 - converting to/from radians, 294
 - critical, 1074, 1074–1076
 - equality of, A–10, A–10
 - small angle approximation, 465, 465*t*
- Angle of deviation (δ), 1070, 1070
- Angle of incidence, 1062, 1062
- Angle of reflection, 1062, 1062
- Angle of refraction, 1065, 1065–1069, 1066
- Angular acceleration (α)
- average (α_{avg}), 295, 300
 - instantaneous (α), 295–296, 298, 314*t*
 - and torque, 302–307
- Angular displacement ($\Delta\theta$), 294, 294
- Angular frequency (ω)
- of AC voltage, 999
 - of electromagnetic waves, 1037
 - of oscillation in *LC* circuit, 982
 - of *RLC* circuit, 1010
 - in simple harmonic motion, 453, 454, 455, 456, 462–463
 - of simple pendulum, 465
 - of sound wave, 509
 - of wave, 488, 491
- Angular impulse–angular momentum theorem, 341
- Angular magnification (m), 1118, 1118–1119, 1120, 1121
- Angular momentum (\vec{L}), 314*t*, 335–352, 339
- and axis, choice of, 339
 - conservation of, 345–350, 346, 352, 403
 - in isolated system, 345–350
 - in nonisolated systems, 338–342, 339, 341
- orbital
- and magnetic moment, 919, 919–920
 - quantization of, 919–920, 1312–1314, 1313
- of photon, 1322
- of planetary orbit, 396–397, 403
- of rigid object, 342, 342–345
- of system of particles, 340–342
- torque and, 338–339, 340–341, 350–351, 351
- Angular position (θ), 294, 294, 296–297, 296*t*
- Angular speed (ω), 92–93, 94, 294–295, 296–297, 296*t*, 299, 314*t*
- vs.* angular frequency, 462
 - average (ω_{avg}), 294
 - of charge in magnetic field, 876, 878
 - instantaneous (ω), 295
- Angular velocity, 295–296, 296, 298, 298
- Angular wave number. *See* Wave number
- Antenna
- dipole, 1044, 1044–1045
 - electromagnetic wave production by, 1044, 1044–1045
 - half-wave, 1044, 1044–1045
- Antibaryons, 1454*t*, 1456, 1463
- Anti-bottom quark, 1463*t*, 1464*t*
- Anti-charmed quark, 1463*t*, 1464*t*
- Antiderivative. *See* Integration
- Anti-down quark, 1463*t*, 1464*t*
- Antileptons, 1458
- Antilogarithm, A–9
- Antimuons, 1458

- Antineutrinos ($\bar{\nu}$), **1400**–1401, *1401*
 Antineutrons, 1449
 Antinodes, *539*, **539**–540, *540*, 541
 displacement, **546**, *547*, 550
 pressure, 546
 Antiparticles, 1391, *1449*, 1449–1451, *1450*, *1454t*
 Antiprotons, 1449
 Antiquarks, 1463, *1463t*, *1464t*
 Anti-strange quark, *1463t*, *1464t*
 Anti-top quark, *1463t*
 Anti-up quark, *1463t*, *1464t*
 Apex angle (Φ), 1070, *1070*
 Aphelion, 396
 Apogee, 396
Apollo II, 1064
 Applied force (\vec{F}_{app}), 186–187
 Aqueous humor, 1115, *1115*
 Arago, Dominique, 1161
 Archimedes, *424*, 426
 Archimedes's principle, **424**–427
 Archimedes's screw, *424*
 Area
 under curve, 43–44, *44*
 as derived quantity, 5
 of geometric shapes, A–11*t*
 units of, 8*t*
 Argon (Ar), electronic configuration, 1320, 1321
 Argon ion laser, 1328
 Aristotle, 40
 Art forgery detection, 1436
 Artificial radioactivity, **1404**, *1404t*
 Associative law of addition, 63, *63*
 Astatine (At), electronic configuration, 1321
 Astigmatism, **1117**
 Astronomical unit (AU), 397
 Astronomy and astrophysics. *See also*
 Gravitation; Moon; Planet(s);
 Planetary motion; Stars; Sun;
 Telescopes; Universe
 Doppler effect in, 520, 1209–1210
 Einstein's cross, *1222*
 history of, 394–395
 space–time distortion by gravity, 1221–1223, *1222*
 spectral analysis of stars, 1298
 Whirlpool galaxy, *388*, 406
 ATLAS (A Toroidal LHC Apparatus), 1468
 Atmosphere (unit of pressure), 423
 Atmosphere of Earth
 atmospheric blurring and, *1160*, *1169*, *1169*
 carbon dioxide levels, 1351, *1351*
 Atmosphere of planets, escape speeds and, 405
 Atmosphere of Sun, analysis of gases in, 1297–1298
 Atmospheric pressure (P_0), 419, 420, 423
 Atmospheric temperature, cloud cover and, 613
 Atom(s)
 binding forces, modeling of, 460, *460*
 etymology of, 6, 1447
 history of concept, 1447
 ionization of, **1303**
 magnetic dipole moment of, *919*, 919–920, 920*t*
 models, 627
 Bohr (semiclassical), 627, *1300*, 1300–1305, *1302*, *1303*, 1311
 classical, *919*, 919–920, 920
 early, *1299*, 1299–1300, *1300*
 history of, 6–7
 planetary, 1299–1300, *1300*
 quantum, 627, *919*, 1306–1308
 potential energy of, in molecule, 201, *201*
 quantization of energy in. *See* Energy levels, quantization of
 shells, **1307**, *1307t*
 filling of, 1318–1320, *1318t*, *1319*
 spin angular momentum in, 920, 920
 subshells, **1307**, *1308t*
 filling of, 1318–1320, *1318t*, *1319*
 thermal expansion and, 574
 Atomic clocks, 5, 5
 Atomic cohesive energy
 of covalent solids, 1355, *1355t*
 of ionic solids, **1353**
 Atomic force microscope (AFM), 1284
 Atomic mass, A–22*t*–A–23*t*
 vs. mass number, 1381
 Atomic mass unit (u), 578, **1381**–1382
 rest-energy equivalent, 1382
 Atomic number (Z), **7**, **1303**–1304, **1381**, A–22*t*–A–23*t*
 vs. ionization energy, *1321*, 1321–1322
 Moseley data on, *1324*, *1324*
 vs. neutron number, for stable nuclei, 1385, *1385*, 1394–1395, *1395*
 Atomic physics, 1191
 Atomic spectra, of gases, 1297–1299, *1298*, 1322–1325
 splitting of, in magnetic field, 1304, *1313*, 1313–1314
 Atomic spectroscopy, 1171
 Atomic theory, history of, 6–7, 567
 Atomizers, 434, *434*
 A Toroidal LHC Apparatus (ATLAS), 1468
 Atwood machine, 128, *128*, 315–316, *316*
 Audible sound waves, 507
 Audio systems
 impedance matching in, 1016
 speaker crossover networks, 1019
 Aurora australis, 879
 Aurora borealis, 879
 Automobiles
 air bags in, *254*
 braking distance, 225–226
 car lifts, *420*, 420–421
 “centrifugal” force in turns, 159, *159*
 collisions, *247*, *255*, 255–256, 261, 265–266, *266*
 drag racing, *21*
 electric, charging systems for, 980
 engine of, 654, 655
 fuel-cell-powered, *1*
 hybrid engines, 952, *952*
 hydraulic brakes, 421
 kinetic energy of, 189*t*
 maximum speed in turn, *153*, 153–155, *154*
 means of propulsion, 277
 rearview mirrors
 convex, 1100, *1100*
 day/night setting on, 1092, *1092*
 and rolling friction, 318
 suspension vibration in, 457–458
 taillight reflectors, 1064, *1064*
 tangential and radial acceleration of, 95, 95–96
 tire pressure, 629
 Average acceleration (a_{avg}), **31**, *31*, 33, 34, **80**, 314*t*
 in uniform circular motion, 92
 Average angular acceleration (α_{avg}), **295**, 300
 Average angular speed (ω_{avg}), **294**
 Average coefficient of linear expansion (α), **574**, *575t*
 Average coefficient of volume expansion (β), **574**–575, *575t*
 Average current (I_{avg}), **809**
 Average energy density, of electromagnetic waves, 1040
 Average power (P_{avg}), **232**
 Average power, electrical (P_{avg})
 in AC circuits, **1011**–1013
 in series *RLC* circuit, 1011–1014, *1014*
 Average speed (v_{avg}), **24**–25
 Average velocity (\vec{v}_{avg}), **23**–25, 36, **79**, *80*
 Avogadro's number (N_A), **578**
 Axions, 1474
 Axis
 major, of ellipse, **395**
 minor, of ellipse, **395**
 of rotation, 295, 301, 339
 semimajor, of ellipse, **395**, *395*
 semiminor, of ellipse, **395**, *395*
 Back emf, 952–953, 971, 973
 Background radiation, 1434
 Back-of-the-envelope calculations, 11
 Bainbridge mass spectrometer, 880
 Balances, eddy current damping in, 954–955, *955*
 Ballistic pendulum, 261–262, *262*

- Balmer, Johann Jacob, 1298, 1303
 Balmer series, **1298**, 1298, 1303, 1304
 Band, **1360**
 Band theory of solids, 1359,
 1359–1361, 1360
 and electrical conduction, 1361–1364,
 1361–1364
 Bardeen, John, 1368, 1370
 Barium (Ba), isotopes, 1397*t*
 Barometer, 423, 423
 Barometric pressure (P_0), 423
 Barrier(s), 1278
 square, **1281**
 tunneling through, 1281, **1281**–1282,
 1399, 1399
 applications, 1267, 1282–1286
 Barrier height (U), **1281**
 Baryon(s)
 antiparticles, 1454*t*, 1455
 composition, 1462, 1463, 1464, 1464*t*,
 1466, 1466
 properties, 1454*t*, **1455**
 patterns in, 1461, 1461–1462
 Baryon number, **1456**
 law of conservation of, **1456**
 Base e , A-9–A-10
 Base of logarithms, **A-9**
 Battery
 circuit symbol for, 782
 emf of, **833**–836, 834
 function of, 809
 induced current charging systems for,
 979, 979–980
 internal resistance, 834, **834**–835
 terminal voltage, 834–835
 BCS theory, 1370–1372
 Beam splitters, 1147, 1148
 Beat frequency (f_{beat}), 551–**552**
 Beating, 550–552, **551**, 551
 Beauty quark, 1464
 Becquerel (Bq), **1392**
 Becquerel, Antoine-Henri, 1380,
 1390, 1391
 Bednorz, J. Georg, 1371
 Bernoulli, Daniel, 430, 430
 Bernoulli effect, 431, 434
 Bernoulli's equation, 430–433, **431**
 Beryl, 1174
 Beryllium (Be)
 electronic configuration, 1319, 1319
 isotopes, 1396*t*
 Beta (β) decay, 1391, 1391, 1394, 1395,
 1399–1402, 1400, 1401
 and carbon dating, 1402–1403
 and cellular damage, 1434*t*
 decay pathways, 1404*t*
 and neutron activation analysis,
 1435–1436
 Beta particle, 1400
 Beta rays, 1380
 Betelgeuse (star), color of, 1235, 1235
 Biconcave lens, 1106
 Biconvex lens, 1106
 Big Bang theory, 1469–1470, 1470
 cosmic background radiation from,
 1470, 1470–1471, 1471
 and expansion of Universe, 1471,
 1471–1474
 Bimetallic strip, 575, 575
 Binding energy, 401
 nuclear, 1386, **1386**–1387
 in liquid-drop model, 1387–1389,
 1388, 1389
 Binding forces, atomic, modeling of,
 460, 460
 Biophysics. *See* Medicine and biophysics
 Biot, Jean-Baptiste, 904
 Biot–Savart law, 904–909, **905**, 905
 Birefringent materials, 1179, **1179**–1180,
 1179*t*, 1180
 Bismuth (Bi), isotopes, 1397*t*
 Black body, **613**, **1234**, 1234
 Blackbody radiation, **1234**
 classical prediction *vs.* experimental
 results, 1234–1236, 1235, 1236
 quantum-mechanical approach,
 1236–1238
 Black holes, 405–**406**, 406, 1223
 Boat, bow wave of, 522, 522
 Bohr, Niels, 1233, 1300–1305,
 1301, 1314
 Bohr magneton (μ_B), **920**
 Bohr orbits, radii of, in hydrogen,
 1302, 1302
 Bohr radius (a_0), **1302**
 Boltzmann, Ludwig, 640, 670
 Boltzmann distribution law, **639**, 1237
 Boltzmann's constant (k_B), **579**, 670
 Bond energy, 591
 Born, Max, 1269
 Boron (B)
 electronic configuration, 1319, 1319
 isotopes, 1396*t*
 decay of, 1404, 1404
 Bosons, 1370
 gauge (field particles), **1448**, 1449*t*,
 1451–1453, 1452, 1453
 Higgs, 1447, **1468**
 in Standard Model, 1467–1468, 1468
 Bottomness, 1464
 Bottom quark (b), 7, 1463*t*, **1464**, 1464*t*
 Boundary, of system, **178**
 Boundary conditions
 classical particles under, 1272
 quantum particles under, 1271–1277,
 1272, 1273, 1274
 analogy to standing waves, 1276
 analysis model for, 1276–**1277**
 free electron theory of metals,
 1355–1359, 1356, 1357
 Schrödinger equation and,
 1278–1279, 1280, 1281
 well of finite height, 1279,
 1279–1281, 1281
 well of infinite height, 1271–1277,
 1272, 1273, 1274
 Boundary conditions, waves under. *See*
 Standing waves
 Boyle, Willard S., 1245
 Boyle's law, 578
 Brachytherapy, 1436
 Brackett series, 1299
 Bragg, W. L., 1175
 Bragg's law, **1175**
 Brahe, Tycho, 394–395
 Brass
 average expansion coefficient, 575*t*
 specific heat, 594*t*
 Brattain, Walter, 1368
 Breakdown voltage of capacitor, 791
 Bremsstrahlung, 1323, 1323, 1428
 Brewster, David, 1178
 Brewster's angle, **1178**
 Brewster's law, **1178**
 Bridges, oscillation in, 470, 470–471
 British thermal unit (Btu), **592**
 Bromine (Br), electronic configura-
 tion, 1321
 Brookhaven National Laboratory, 1462,
 1464, 1468, 1469
 Brown, Robert, 567
 Brownian motion, 567
 Btu. *See* British thermal unit
 Bubble chambers, 1450, 1450
 Buckminsterfullerene (buckyballs),
 1354, 1354
 Buckytubes, 1354
 Bulk modulus (B), **373**, 374–**375**, 374*t*,
 375, 509–512
 Buoyant force (\vec{B}), 423–427, **424**,
 424, 425
 Burn rate, 278
 Busch, Kyle, 150
 Calcite
 as birefringent, 1179, 1179
 thermal expansion in, 574
 Calcium (Ca), isotopes, 1396*t*
 Calculations, estimation in, 10–11
 Calculus
 definite integral, 44, **A-17**,
 A-17, A-19*t*
 derivatives, 26, A-14,
A-14–A-16, A-14*t*
 partial, 490
 properties, A-14
 rules for, 34–35
 second, A-14
 of position with respect to time, 33
 of vector product, 336
 of velocity with respect to time, 32
 differential, 163, A-13–A-16
 history of, 25

- Calculus (*continued*)
 indefinite integral, **A-16**, A-18t-A-19t
 integral, 43-45, 44, A-16-A-19
- Caloric, 591
- Calorie (cal), **591-592**
- Calorie (food calorie), 592
- Calorimeter, **595**, 595
- Calorimetry, 595, **595-596**
- Camera(s), *1113*, **1113-1115**, 1245
 digital, *1113*, **1113-1115**, 1245
 electron bombardment CCD, 1245
f-number, **1114-1115**
 lens coatings, 1147, *1147*
 light meter in, 1244
 spherical aberration in, 1113
- Cancer, radiation and, 1433
- Candela (cd), 3
- Capacitance, **777-778**
 calculation of, 779-782, 797-798
 of capacitor with dielectric, 790, 790-791
 of charged sphere, 779
 of cylindrical capacitor, 780, 780-781
 equivalent, **783-786**, **785**
 mechanical analogy to, 980-982, *981*, 984-985, 985*t*
 of parallel-plate capacitor, 779-780, 780
 of spherical capacitors, 781, 781-782
 units of, 778
- Capacitive reactance, **1006**, 1007, 1009-1010
- Capacitor(s), **777**, 778. *See also RC circuits; RLC circuits*
 in AC circuits, 1004-1007, *1005*, 1011
 applications of, 777, 777, 780, 789-790, 1011, 1014, 1019
 breakdown voltage of, 791
 capacitance of. *See* Capacitance
 charge as function of time
 charging capacitor, 848, *848*
 discharging capacitor, 849, *849*
 charge on, 777-778, 783, 784
 charging of, 778-779, 846-849, *847*, *848*, 850
 in circuit analysis, 844
 circuit symbol for, 782
 current as function of time
 charging capacitor, 848, *848*
 discharging capacitor, 849, *849*
 cylindrical, capacitance of, 780, 780-781
 with dielectrics, 790, 790-793, 792, 795-798, *796*
 discharging of, 849, *849*, 850-851
 displacement current in, *1031*, **1031-1033**
 electrolytic, 792, *792*
 energy stored in, 786, 786-790, 787, *976*
 equivalent, 783-786
 labels on, 787-788
 maximum charge on, 847, 848, *848*, 850
 maximum operating voltage, 787-788, 791
 parallel combination of, **782-783**, 783, 785-786
 parallel-plate, 750-751, *751*, 778, 778-779
 capacitance of, 779-780, *780*
 potential difference between plates of, 777-778
 rated voltage of, 791
 series combination of, 784, **784-786**
 spherical, capacitance of, *781*, 781-782
 types of, 792, *792*
 variable, 792, *792*
 working voltage of, 791
- Carbon (C)
 atomic mass unit and, 1381
 C_{60} (buckminsterfullerene), **1354**, *1354*
 covalent bonding of, *1354*, 1354-1355
 electronic configuration, 1319, *1319*
 isotopes, 1381, 1396*t*
 and carbon dating, 1402-1403
 decay of, 1393-1394, 1400, *1401*, 1404, *1404*
 mass of atom, 1382, 1382*t*
 resistivity of, 814*t*
- Carbon dating, 1402-1403
- Carbon dioxide (CO_2)
 as greenhouse gas, 1351, *1351*
 index of refraction, 1067*t*
- Carbon dioxide lasers, 1328
- Carbon monoxide (CO)
 rotation of, 1346
 vibration of, 1348-1349
- Cardiac catheterization lab, *904*
- Carnot, Sadi, 660, *661*
- Carnot cycle, **660-664**, *662*
- Carnot engine, **660-665**, *661*, *662*
 entropy change in, 673-674, 677-678
- Carnot's theorem, **660**
- Cartesian coordinate system, 59, *59*
 conversion to/from polar coordinates, 60-61
- Cataracts, UV light and, 1046
- Categorization of problems, 45, 46. *See also* Problem-solving strategies
- Cavendish, Henry, 389, *389*
- CCD. *See* Charge-coupled device (CCD)
- CDs. *See* Compact discs (CDs)
- Cell separator, laser, 1329
- Celsius scale, **571**, 572
 conversion to/from, 572, 573
- Center of gravity, 269, *269*
 of rigid object, 365, 365-366, *366*
- Center of mass, **267-272**, 268, *269*
 acceleration of, **272**
 center of gravity and, 365, 365-366
 linear momentum of, **272**
 motion of, 272-274
 of rolling object, 316-317, *317*
 velocity of, **272**
- Centers for Disease Control and Prevention, U.S., 1437
- Central maximum, **1161**, *1161*, *1170*
- Centrifugal force, 159, *159*, 160
- Centripetal acceleration (a_c), 91-94, **92**, 95, 150-156, 298-299
- Ceramic superconductors, 820
- Cerium (Ce), isotopes, 1397*t*
- CERN (European Organization for Nuclear Research), *868*, *1191*, 1454, 1465, 1468
- Cesium (Cs)
 electronic configuration, 1321
 isotopes, 1397*t*
- Cesium fountain clock, 5
- Chadwick, James, 1383
- Chain reaction, nuclear, *1421*
 critical, subcritical, and supercritical, **1422**
 self-sustained, 1422, *1422*
- Chain rule of differential calculus, A-14
- Challenger* shuttle disaster, *1452*
- Chamberlain, Owen, 1449
- Champagne bottle, opening of, 579, *579*
- Change in, symbol for (Δ), 23
- Characteristic x-rays, *1322*, **1323-1325**
- Charanka Solar Park, 1367
- Charcoal briquettes, color of glow from, 1234, *1234*
- Charge (q)
 on capacitor, 777-778, 783, 784
 conservation of, **691**, *691*, 843
 fundamental (e), 692, 694, 764-765
 in *LC* circuit, 982, *983*
 mechanical analogy to, 985*t*
 moving, magnetic field created by, 869
 positive and negative, **691**
 properties of, 690-692, *691*
 quantization of, **692**, 764-765
 source, 699, *699*
 test, 699, *699*
 units of, 694
- Charge carrier, 809
 drift speed/velocity of, *810*, 810-811, 816-817, 891
- Charge carrier density, 891
- Charge-coupled device (CCD), 1113, *1113*, 1245
- Charge density
 linear, **704-705**
 surface, **704-705**
 volume, **704-705**
- Charging
 of capacitors, 846-849, *847*, *848*, 850
 by conduction, 693
 of conductors, 692, 692-693

- by induction, 692, **692**–693
- of insulators, 693, 693
- Charles's law, 578
- Charm (C), **1463**–1464
- Charmed quark (c), 7, 1463–1465, 1463*t*, 1464*t*
- Charon (moon of Pluto), 1169, 1169
- Cheese mite (*Tyrollichus casei*), 1252
- Chernobyl nuclear power plant
 - accident, 1424
- Chip technology, advances in, 1369, 1369
- Chlorine (Cl), electronic configuration, 1321
- Choice, of microstates, 668–671
- Choroid, 1115
- Christmas tree light strings, 839–840, 840
- Chromatic aberration, **1113**, 1113, 1121
- Chu, Steven, 1329
- Ciliary muscle, 1115
- Circles, A–10, A–10, A–11*t*
- Circuit(s). *See* Alternating-current (AC) circuits; Direct-current (DC) circuits
- Circuit boards, 833
- Circuit diagram, **782**
- Circuit elements. *See* Capacitor(s); Diode(s); Inductor(s); Resistor(s)
- Circuit symbols, **782**
 - AC source, 999
 - battery, 782
 - capacitor, 782
 - diode, 1018
 - inductor, 973
 - resistor, 820
 - switch, 782
- Circular aperture, resolution through, 1166–1169, 1167, 1169
- Circular motion. *See* Nonuniform circular motion; Uniform circular motion
- Cladding, 1076, 1076
- Classical mechanics, 1, 2–3, 1192. *See also* Mechanics
- Classical physics, 1, 2–3
- Clausius statement of second law of thermodynamics, **657**, 676
- Clocks. *See also* Time
 - atomic, 5, 5
 - pendulums and, 465
- Cloud chambers, 1449–1450
- CMS (Compact Muon Solenoid)
 - Detector, 1191, 1468
- Coaxial cable
 - capacitance, 781
 - inductance, 978, 978
 - radial resistance, 815–816
- Cobalt (Co)
 - as ferromagnetic substance, 920
 - isotopes, 1397*t*
 - in radiation therapy, 1436, 1436
- COBE satellite, 1471, 1471
- Coefficient(s), **A–7**
- Coefficient of kinetic friction (μ_k), **131**–135, 132*t*, 230–231
- Coefficient of performance (COP), **657**–659, 663
- Coefficient of static friction (μ_s), **131**–133, 132*t*, 154
- Coherent light sources, **1136**
- Cohesive energy, atomic
 - of covalent solids, 1355, 1355*t*
 - of ionic solids, **1353**
- Coil
 - Faraday's law for, 937, 938–939
 - inductance of, 971–972
 - magnetic dipole moment of, 888
- Collective model of nucleus, 1390
- Colliders, **1468**–1469, 1469
- Collisions, **256**, 256
 - on atomic level, 256, 256, 257, 266–267
 - elastic, **257**–260, 258, 264, 264–265, 266–267
 - glancing, 264, 264–265, 266–267
 - inelastic, **257**, 265–266, 266
 - in one dimension, **256**–264
 - problem-solving strategy for, 259
 - perfectly inelastic, **257**, 257, 261–262
 - in two dimensions, 264, 264–267
 - problem-solving strategy for, 265
- Color, light wavelength and, 1045*t*
- Color charge, **1465**–1467, 1466
- Color force, **1466**
- Color television, 1116
- Comet Halley, orbit of, 395, 396
- Common factor, A–7
- Common logarithms, **A–9**–A–10
- Commutative law of addition, for vectors, 62, 62
- Commutative property of scalar product, **181**
- Commutator, 951, 951
- Compact discs (CDs)
 - as diffraction grating, 1170, 1170–1171
 - information storage and retrieval, 299–300
- Compact fluorescent lightbulbs, 808
- Compactified dimensions, 1475, 1475
- Compact Muon Solenoid (CMS)
 - Detector, 1191, 1468
- Compass
 - Earth's magnetic field and, 870, 870
 - history of, 868
 - tracing magnetic field lines with, 869, 869–870
- Complementarity, principle of, **1250**
- Components, of vector, 65, **65**–70
- Component vectors, 65, 65–66
- Composition resistor, 812
- Compound microscope, 1119, **1119**–1120
- Compressibility, **375**
- Compression
 - quasi-static, **601**–602
 - of spring, 229–230
 - in wave, 508, **509**
- Compression ratio, **666**–667
- Compression stroke, 665, 666
- Compressive strength, 376
- Compton, Arthur Holly, 1246, 1246–1247, 1247
- Compton effect, 1246, **1246**–1248, 1247
- Compton shift equation, **1247**–1248
- Compton wavelength (λ_C), **1247**
- Computer keyboard buttons, 780, 780
- Concave mirrors, 1093, **1093**–1095, 1094, 1098–1099
 - ray diagrams for, 1096, 1097
 - in telescopes, 1121, 1121
- Conceptualizing problems, 45, 46. *See also* Problem-solving strategies
- Concrete
 - average expansion coefficient, 575*t*
 - prestressing of, 375, 375–376
 - thermal conductivity, 609*t*
- Condensation, latent heat of, 598
- Condensed matter physics, 1191, 1340
- Condition for pure rolling motion, **317**
- Condon, E. U., 1399
- Conduction. *See* Electrical conduction; Thermal conduction
- Conduction band, 1361–1363, **1362**–1364
- Conduction current, 1031
- Conduction electrons, 816
- Conductivity, **812**, 817
- Conductor(s), **692**
 - charged, electric potential due to, 761, 761–764, 762
 - charging of, 692, 692–693
 - current-carrying
 - in magnetic field, 882–885, 883, 884
 - Hall effect, 890, 890–892
 - magnetic field created by, 904–909, 905 (*See also* Ampère's law)
 - magnetic force on, 882–885, 883, 884
 - electric field of
 - in cavities, 763, 763
 - and corona discharge, 763–764, 766, 766
 - in electrostatic equilibrium
 - properties of, 735, **735**–737, 736
 - surface electric potential of, 761, 761–762
 - parallel, magnetic force between, 909, 909–911
- Cones, in eye, 1116, 1116
- Confinement time (τ), **1428**
- Conical pendulum, 152
- Conservation of angular momentum, **345**–350, 346, 352, 403
- Conservation of baryon number, **1456**

- Conservation of charge, **691**, 691, 843
 Conservation of charm, 1463
 Conservation of electron lepton number, **1458**
 Conservation of energy, 197, 211–233, **213**
 and first law of thermodynamics, 603–604
 friction and, 196, 196–197, 216–217, 222–231
 history of concept, 590, 592
 in isolated systems, 215–222
 mechanical, 198, **216**–217, 218, 221, 314
 nonisolated systems and, 212, 212–215
 in planetary orbit, 402–403
 problem-solving strategies, 217–218
 in relativistic situations, 1219
 uncertainty principle and, 1452–1453
 Conservation of energy equation, **213**–215, 275
 Conservation of lepton numbers, 1458–1459
 Conservation of momentum
 angular, **345**–350, 346, 352, 403
 linear, 250–251, **254**, 257, 277
 Conservation of momentum equation, **254**
 Conservation of muon lepton number, 1458
 Conservation of strangeness, **1460**
 Conservation of tau lepton number, 1458
 Conservative field, **752**
 Conservative forces, **197**–198
 and potential energy, 197, 198–199
 work done by, 197–198, 198–199
 Constant acceleration
 motion in one dimension with, **36**, **36**–40
 motion in two dimensions with, 81–84
 particle under, analysis model, **36**, **36**–40, **38**
 in projectile motion, 84–85, 88–89
 Constant-volume gas thermometers, 571, 571–572
 Constructive interference, **534**, 535, 536, 536, 537
 of light waves, 1134–1136, 1135, 1136, **1138**, **1139**, 1140–1142, 1144, 1145, 1161, 1169–1170, 1174, 1174
 Contact forces, 112, 112, 126
 Continuity equation for fluids, 428, **428**–430
 Control rods, of nuclear reactor, 1423, **1423**–1424
 Convection, 213, **612**–613, 613
 Conversion of units, A–1t–A–2t
 Convex-concave lens, 1106
 Convex mirror(s), 1095, **1095**–1096, 1099–1100, 1100
 ray diagrams for, 1096–1098, 1097
 Cooper, L. N., 1370
 Cooper pair, 1370–1371
 Coordinate systems, 59–61
 Cartesian, 59, 59
 conversion between systems, 60–61
 orientation of, 66
 polar coordinates, 59–60, 60, 294
 space–time coordinates, 1210–1211
 spherical, 1277
 spherical polar coordinates, 1306, 1306
 COP. *See* Coefficient of performance
 Copernicus, Nicolaus, 394
 Coplanar forces, 364
 Copper (Cu)
 average expansion coefficient, 575t
 density, 419t
 Fermi energy, 1357t
 free electrons in, 694
 Hall effect in, 891–892
 isotopes, 1397t
 latent heats of fusion and vaporization, 598t
 neutron activation analysis and, 1435–1436
 resistivity, 814t, 819, 819
 specific heat, 594t
 speed of sound in, 512t
 thermal conductivity, 609t
 work function of, 1243t
 Coriolis force, 159–160, 160
 Cornea, 1115, 1115
 Corona discharge, 763–764, 766, 766
 Correspondence principle, **1304**
 Cosecant (csc), A–11, A–12t
 Cosine (cos), A–11–A–12, A–12t
 COsmic Background Explorer (COBE), 1471, 1471
 Cosmic background radiation, 1470, 1470–1471, 1471
 Cosmic rays, 879
 Cosmology, questions remaining in, 1474
 Cotangent (cot), A–11, A–12t
 Coulomb (C), **694**–695, **910**
 Coulomb, Charles, 694, 694
 Coulomb constant (k_e), **694**
 Coulomb force. *See* Electric force
 Coulomb repulsion effect, in liquid-drop model of nucleus, 1387–1388
 Coulomb's law, **694**–699
 vector form of, 695–699, 696
 Covalent bonding, 1342, **1342**–1343
 in solids, 1354, 1354–1355
 Crab Nebula, 1030
 Crest, of wave, **487**, 487
 Critical angle, 1074, **1074**–1076
 Critical ignition temperature (T_{ignit}), 1428, 1428–1429
 Critically damped oscillation, **469**, 469
 in *RLC* circuit, 985
 Critical reaction, **1422**
 Critical temperature (T_c), **819**–820, 820t, 1370
 Crossover networks, 1019
 Cross product. *See* Vector product
 Crystal(s)
 birefringent (double-refracting), 1179, 1179, 1179t
 ionic bonding in, 1352–1354, 1353
 x-ray diffraction by, 1174, 1174–1175, 1175
 Crystalline lens, 1115, 1115
 Crystalline solids, 1179, 1340
 Cubic zirconia, 1075
 Curie (Ci), **1392**
 Curie, Marie, 1390–1391, 1391
 Curie, Pierre, 1390–1391, 1391
 Curie temperature, **921**, 921t
 Current (I), 808–811, **809**, 809. *See also*
 Electrical conduction
 analogies to, in water and heat flow, 809
 average (I_{avg}), **809**
 in capacitor in AC circuit, 1004–1007, 1005
 conduction, 1031
 direction of, 809
 displacement, 1031, **1031**–1033, 1032
 and electric shock, 834
 in home appliances, 853
 induced, 935–939, 936, 937, 938, 970
 (*See also* Induction)
 in inductor in AC circuit, 1002–1004, 1003
 instantaneous, **809**
 in *LC* circuit, 982, 983
 mechanical analogy to, 985t
 microscopic model of, 810, 810–811
 misconceptions about, 821
 and path of least resistance, 838
 in resistor in AC circuit, 999–1002, 1000, 1001
 in *RL* circuit, 973–975, 974, 975
 in series *RLC* circuit, 1007, 1007–1009, 1008, 1013–1015, 1014
 in simple DC circuit, 834–835, 845–846
 units of, 3, 4, 809, A–24t
 Current balance, 910
 Current density (J), **811**–812, 817
 Current loop
 inductance of, 971–972
 magnetic dipole moment of, 887, **887**–888, 889, 889, 919
 in magnetic field
 magnetic force on, 885, 885–886, 886
 motional emf in, 940, 940–943, 942, 944–947, 945–947
 torque on, 885, 885–889, 886, 887
 magnetic field on axis of, 908, 908–909, 909
 Curvature of space–time, 1222, 1222–1223
 Cutoff frequency (f_c), **1242**, 1244
 Cutoff wavelength (λ_c), **1244**

- Cyclic process, **604**
 Cycloid, 316, *317*
 Cyclotron, 881–882, *882*
 Cyclotron frequency, 876, *878*
 Cylindrical capacitors, capacitance of, *780, 780–781*
- Dalton, John, *592*
 Dam, force on, *422–423*
 Damped oscillation, *468, 468–469, 469*
 in *RLC* circuit, *984–985*
 Damped oscillator, **468**
 Damping coefficient (*b*), *468*
 Dark energy, *1474*
 Dark matter, *406–407, 1474*
 Daughter nucleus, **1395**
 Davisson, C. J., *1250*
 Davisson–Germer experiment, *1250–1251*
 DC. *See* Direct current (DC)
 Dead Sea Scrolls, dating of, *1402*
 De Broglie, Louis, *1233, 1249, 1249*
 De Broglie wavelength, *1250–1251*
 Debye, Peter, *1246*
 Decay, spontaneous, **1395**
 Decay constant, **1391**
 Decay rate (*R*), *1392, 1392–1394*
 Deceleration, **33**
 Decibels (dB), *515–516, 515t*
 Decorative light strings, *839–840, 840*
 Dees, of cyclotron, *881–882, 882*
 Defibrillator, *777, 789–790*
 Definite integral, *44, A–17, A–17, A–19t*
 Deformable systems
 conservation of angular momentum
 in, *345–346, 346*
 elastic properties of solids, *373–376*
 motion of, *275–277*
 work in, *179*
 and work–kinetic energy theorem, *189*
- Degrees, converting to/from
 radians, *294*
- Degrees of freedom of molecule, and
 molecule energy, *630, 635–636*
- Delta (Δ) [particle], *1454t, 1464t, 1465*
 Delta (Δ) [symbol], *23*
- Democritus, *6*
- Density (ρ), **6**
 of common substances, *419t*
 measurement of, *426, 426*
 temperature and, *419, 577, 577*
- Density-of-states function, **1357**,
 1358–1359
- Department of Energy, U.S., *1424–1425*
- Depletion region, of junction diode,
 1365, 1365
- Depth, and pressure, *419–423, 420*
 Depth of field, **1114**
- Derivatives, *26, A–14, A–14–A–16, A–14t*
 partial, *490*
 properties, *A–14*
 rules for, *34–35*
 second, *A–14*
 of position with respect to time, *33*
 of vector product, *336*
 of velocity with respect to time, *32*
- Derived quantities, *5–6, A–24t*
- Destructive interference, **534**, *535, 536, 536, 537*
 of light waves, *1134, 1135, 1135–1136, 1136, 1138, 1139, 1140–1142, 1162–1163*
- Deuterium, fusion and, *1426–1428, 1428, 1430, 1431, 1431, 1432*
- Dewar flask, *614, 614*
- Diamagnetism, *921–922, 922*
 superconductors and, *1370*
- Diamonds
 index of refraction, *1067t*
 sparkling of, *1075*
 structure and bonding of, *1354, 1354*
- Dielectric constant (κ), **790–791**, *791t*
- Dielectrics, **790**
 atomic description of, *795–797, 796*
 capacitors with, *790, 790–793, 792, 795–798, 796*
 polarization of, *795–797, 796*
- Dielectric strength, **791**, *791t*
- Diesel engines, *638–639, 655, 666–667*
- Differences of squares, *A–7*
- Differential calculus, *A–13–A–16*
- Differential equation, *163*
- Differentials, perfect, *A–18*
- Differentiation, *A–13–A–16. See also*
 Derivatives
- Diffraction, *1061, 1061, 1160–1161*
 of electrons, *1250–1251*
 interference and, *1136–1137, 1137*
 of x-rays by crystals, *1174, 1174–1175, 1175*
- Diffraction grating(s), **1169–1174**, *1170*
 applications, *1171–1174, 1172, 1173, 1174*
 light intensity distribution, *1170, 1170*
 position of fringes, *1170, 1170, 1171*
- Diffraction grating spectrometer,
 1171, 1172
- Diffraction patterns, **1160–1161**, *1161*
 of diffraction grating. *See* Diffraction
 grating(s)
 as interference, *1162–1163*
 of light passing circular object,
 1161, 1161
 of light passing edge of object,
 1161, 1161
 multiple slits, *1142, 1142*
 single slits, *1161–1165, 1162, 1164*
 light intensity distribution,
 1164, 1164
 position of fringes, *1162, 1162–1164*
- Diffuse reflection, **1062**, *1062*
- Digital cameras, *1113, 1113–1115, 1245*
- Digital micromirror device, *1064, 1064–1065*
- Digital movie projectors, *1064, 1064–1065*
- Dimension, **7**
- Dimensional analysis, *7–9*
- Dimensions, compactified, *1475, 1475*
- Diode(s), **1018**
 applications, *1018, 1018*
 circuit symbol for, *1018*
 junction, *814, 814, 1365, 1365–1366, 1366*
 light-absorbing, *1366, 1367*
 light-emitting (LEDs), *1366, 1367*
- Diopters, **1117**
- Dipole antenna, *1044, 1044–1045*
- Dipole–dipole force, *1343*
- Dipole–induced dipole force, *1343*
- Dirac, Paul A. M., *1315, 1316, 1317, 1449, 1449*
- Dirac sea, *1449, 1449*
- Direct current (DC), **833**
 AC–DC converters, *1017, 1017, 1018, 1018–1019*
 disadvantages of, *1018*
- Direct-current (DC) circuits
 emf in, **833–836**, *834*
 Kirchhoff's rules, **843–846**
 problem-solving strategy for, *844–845*
 RC circuits, **846–852**
 resistors in parallel, *838, 838–840, 839, 840, 842–843*
 resistors in series, **836–837**, *837, 839*
 RLC circuits, *984–986, 985, 986, 986t*
 RL circuits, *972–976, 973, 973, 974, 975*
 time response of, *974*
- Direct-current (DC) generators, *951, 951–952*
- Direct-current (DC) power supply,
 1018–1019
- Direction of polarization, *1175*
- Direction of propagation, *1035*
- Disintegration energy (*Q*), **1395–1399**,
 1400, 1401–1402, 1405, 1420–1421
- Dispersion, of light waves, **1072–1074**,
 1073, 1074
- Dispersion force, *1343*
- Displacement (Δx), **23**, *23, 43–44, 44*
 angular ($\Delta\theta$), **294**, *294*
 and work, *179*
- Displacement amplitude (s_{\max}), **509–510**,
 510, 512, 513, 514
- Displacement antinodes, **546**, *547, 550*
- Displacement current, *1031, 1031–1033, 1032*
- Displacement node, **546**, *547, 550*
- Displacement vector, **79**, *79*
- Dissociation energy, **1342**
- Distance (*d*), **23**, *23, A–10*
- Distribution function, *639*
- Distributive law of multiplication,
 182, *336*
- Diverging mirrors, *1095, 1095–1096*

- Division
of fractions, A-6
of powers, A-6
in scientific notation, A-5
significant figures in, 12
and uncertainty, A-20
- DNA molecules, hydrogen bonding in, 1344, 1344
- Domains, in ferromagnetic material, 920-921, 921
- Domain walls, 920
- Donor atom, 1318, 1363, 1363
- Doped semiconductors, 1363, 1363-1364, 1364
- Doping, 1362
- Doppler effect, 517, 517-521, 518, 519
relativistic, 1209-1210, 1471-1472
- Doppler-shift expression, general, 519
- Dot product. *See* Scalar product
- Double-refracting materials, 1179, 1179-1180, 1179t, 1180
- Double-slit diffraction patterns
light intensity distribution, 1164-1165, 1165
position of fringes, 1165, 1165
- Double-slit interference patterns, 1134-1142, 1135, 1136, 1142
conditions for interference, 1136
in electron beams, 1255, 1255-1256, 1256
light intensity distribution, 1140-1142, 1142
position of fringes, 1137, 1137-1140
Young's double-slit experiment, 1134-1137, 1135, 1136, 1137
- Doublet, 1314-1315
- Down quark (d), 6, 7, 1462, 1463t, 1464t
- Drag, 434, 434. *See also* Air resistance
- Drag coefficient (D), 164, 167
- Drag racing, 21
- Drain, of field-effect transistor, 1368, 1368
- Drift speed (v_d), 810, 810-811, 816, 891
- Drift velocity (\vec{v}_d), 810, 810, 817
- Drude, Paul, 816
- Drude model of electrical conduction, 816-818
- Dynamics. *See also* Laws of motion
fluid, 427-434
rotational, 335
- Dynode, of photomultiplier tube, 1245
- e (Euler's number), 163, A-9
- e (fundamental charge), 692, 694, 764-765
- ϵ_0 (permittivity of free space), 694
- Ears. *See* Hearing
- Earth
centripetal acceleration of, 93-94
density of, 392
escape speed, 405t, 641-642
as inertial frame, 114
kinetic energy of, 189t
magnetic field of, 870, 870-871, 873t
mass of, 5t
orbit of, 395, 406
ozone layer, 1046
planetary data, 398t
- Ear thermometers, 1238, 1238
- Earthquakes, 485
- Eccentricity, of ellipse (e), 395-396, 396
- Eddy currents, induced, 953, 953-955, 954
- Efficiency. *See* Thermal efficiency (e)
- Eightfold way, 1461, 1461
- Einstein, Albert, 1198
on Brownian motion, 567
and general theory of relativity, 1198, 1221-1223
on photoelectric effect, 1059, 1242-1244
on photon momentum, 1246
and quantum mechanics, 1198, 1233, 1234, 1238, 1283
and special theory of relativity, 2, 3, 1033, 1191, 1192-1193, 1197, 1198, 1198, 1199-1200, 1211
- Einstein's cross, 1222
- Elastic collisions, 257-260, 258, 264, 264-265, 266-267
- Elastic limit, 373-374, 374
- Elastic modulus, 373-375, 374t
- Elastic potential energy (U_s), 194-196, 195
- Elastic properties of solids, 373-376
- Elastic scattering, 1405
- Electrical conduction. *See also* Semiconductors
band theory of solids and, 1361-1364, 1361-1364
charging objects by, 693
model of
classical, 816-818
quantum, 818, 1355-1359, 1356, 1357
superconductors, 819, 819-820, 820, 820t, 868, 873t, 1370, 1370-1371
high-temperature, 1371
Meissner effect in, 922, 922, 1370, 1370
- Electrically charged, 691
- Electrical meter, 853, 853
- Electrical power (P), 820-823
average (P_{avg})
in AC circuits, 1011-1013
in series RLC circuit, 1011-1014, 1014
and cost of running a device, 823
delivered by electromagnetic waves, 1039-1040
to resistor, 821-823, 834-836, 842-843, 852, 1001, 1012
- transmission of, 822, 1015, 1017, 1017-1018
corona discharge in, 763-764, 766, 766
as energy transfer, 212, 213
and I^2R loss, 822, 822
units of, 232
- Electrical safety, in household wiring, 853-855, 854
- Electrical systems, analogies with
mechanical systems, 980-982, 981, 984-985, 985t
- Electrical transmission, 1015, 1017, 1017-1018
corona discharge in, 763-764, 766, 766
as energy transfer, 212, 213
 I^2R loss in, 822, 822
- Electric charge. *See* Charge
- Electric current. *See* Current
- Electric dipole, 701
in electric field, 793, 793-795
electric field lines of, 710, 710
electric field of, 702-703, 755, 756
electric potential around, 758
equipotential surfaces for, 755, 756
- Electric dipole moment (\vec{p}), 793, 793-794
- Electric field (\vec{E}), 699
in capacitor, 750-751, 751, 795-796, 796
of conductor
in cavities, 763, 763
and corona discharge, 763-764, 766, 766
as conservative field, 752
of continuous charge distribution, 704, 704-708
and current density, 812
determining, using Gauss's law, 730-735
direction of, 700, 700-701
due to point charges, 752-754, 753
of electric dipole, 702-703, 755, 756
electric dipole in, 793, 793-795
energy density of, 788, 1040-1041
of finite group of point charges, 701
vs. gravitational fields, 749, 749
induced by magnetic flux change, 947, 947-949
- Lorentz force and, 880
vs. magnetic field, 905-906
motion of charged particle in (uniform field), 710-713
particle in a field model, 699, 699-703, 700, 701
problem-solving strategy for, 705
as rate of change of electrical potential, 748
of sinusoidal electromagnetic wave, 1035, 1035-1039, 1036, 1041-1042

- superposition principle for, 701, 702–703
 units of, 748
 value of, from electric potential, 755, 755–756
 work done by, 747–748, 750, 752–754
- Electric field lines, **708–710**, 709, 710
 of electric dipole, 710, 710
 and electric flux, 725, 725–728, 726, 727
 electric potential and, 749, 749
vs. magnetic field lines, 911, 918, 918
 rules for drawing, 709–710
- Electric field vector, 699–700, 708–709
- Electric flux (Φ_E), 725, **725–728**, 726, 727
 net, 727
 through closed surface, 726–728, 727, 728 (*See also* Gauss's law)
 units of, 726
 zero flux, 730
- Electric force (Coulomb force), **694**
 Coulomb's law for, 694–699
 as field force, 112
 and fusion, 1426, 1426–1427
vs. magnetic force, 871, 873
 and nuclear stability, 1384–1385, 1385, 1390
- Electric guitar, 938, 938
- Electricity, etymology of, 689
- Electric potential (V), 746–748, **747**
 applications of, 765, 765–766, 766
 in DC circuit, 834, 834
 due to charged conductor, 761, 761–764, 762
 due to continuous charge distribution, 756, 756–761
 due to electric dipole, 758
 due to point charges, 752
 problem-solving strategy for, 757
 in uniform electric field, 748–752, 749, 750
 units of, 748
 value of electric field from, 755, 755–756
- Electric potential energy (U)
 in capacitors, 786, 786–790
 due to point charge, 753–754
 of electric dipole in electric field, 794
 of electric dipole in external electric field, 794
 in electric fields, 747–748
vs. electric potential, 747–748
 of particle in electric field, 749, 749–752
 of several point charges, 753, 753–754
- Electric shock, 853–854
- Electrified, definition of, 691
- Electrolyte, 792
- Electrolytic capacitor, 792, 792
- Electromagnetic braking systems, on trains, 954
- Electromagnetic field, force on particle in, 1034
- Electromagnetic plane waves, 1035, **1035–1039**, 1036
 Poynting vector of, 1039–1040
 wave intensity of, 1040, 1041
- Electromagnetic radiation, as energy transfer, 212, 213, 613
- Electromagnetic waves
 applications of, 904, 1030
 electromagnetic spectrum, **1045–1047**, 1046
 energy carried by, 1039–1042
 energy density of, 1039, 1041
 examples of, 483
 light as, 1034–1035, 1037, 1057, 1059, 1197
 media-free propagation of, 483, 1030
 momentum transferred by, 1042–1044
 nature of, 1249
 plane, 1035, **1035–1039**, 1036
 Poynting vector of, 1039–1040
 wave intensity of, 1040, 1041
 production by antenna, 1044, 1044–1045
 properties of, 1035, 1037–1038
 radiation pressure of, 1042–1044
 sinusoidal, 1037–1038, 1038
 sources of, 1045
 speed of, 1035, 1037
 wave intensity of, 1040, 1041
- Electromagnetism
 definition of, 689
 electroweak theory and, 1467–1468
 evolution of, at origin of Universe, 1469, 1470
 field particles for, 1448, 1449*t*, 1452, 1452–1453
 as fundamental force, 112, 690, 1448
 history of, study of, 689, 868–869
 as physics subdiscipline, 1, 2–3
 in Standard Model, 1467–1468, 1468
- Electromotive force. *See* emf
- Electron(s). *See also* Free-electron theory of metals
 antiparticle, 1449, 1449–1451, 1450
 charge of, 691, 692, 694, 695*t*, 1381, 1464*t*
 conduction, 816
 de Broglie wavelength of, 1250–1251
 discovery of, 7
 double-slit interference patterns, 1255, 1255–1256, 1256
 e/m_e ratio for, 881
 as fundamental particle, discovery of, 881
 as lepton, 1455
 magnetic dipole moment of, 919, 919–920
 mass of, 5*t*, 695*t*, 1381, 1382*t*
 nuclear force and, 1385
- properties, 1454*t*
 relativistic momentum of, 1215–1216
 rest energy of, 1218, 1464*t*
 spin angular momentum of, **1316–1317**, 1317
 spin magnetic moment of, 1317, 1317
 spin of, **920**, 920, **1314–1317**, 1315
 and spin magnetic quantum number, 1314–1317, 1315
 in transfer of charge, 691–692
 tunneling by, 1282
 wave properties of, 1250–1251
- Electron affinity, **1341–1342**
- Electron beam, bending of, 877, 877–878
- Electron bombardment CCD camera, 1245
- Electron capture, 1394, **1401–1402**, 1404*t*
- Electron cloud, 1309, 1309
- Electron gas, 816
- Electron-hole pairs, 1363
- Electronic devices. *See also* Generators, electric; Motors, electric; Television
 AC–DC converters, 1017, 1017, 1018, 1018–1019
 chip technology, advances in, 1369, 1369
 defibrillators, 777, 789–790
 digital cameras, 1113, **1113–1115**
 digital movie projectors, 1064, 1064–1065
 electric guitars, 938, 938
 laser pointers, 1043–1044, 1366
 light meter, in camera, 1244
 liquid crystal displays, 1181
 metal detectors, 970
 power tool electromagnetic braking, 954
 radio receiving circuit, 1014
 smoke detectors, 1399, 1399
 solar cells, 1146–1147, 1147
 stud finders, 792, 792
 toothbrushes, 979, 979–980
- Electron lepton number, conservation of, **1458**
- Electron microscopes, 1251, **1251–1252**, 1252
- Electron–neutrino (ν_e), 1454*t*, 1455, 1458, 1464*t*
- Electron spin resonance, 1407
- Electron volt (eV), 639, 748, 1218
- Electrostatic equilibrium, conductors in
 properties of, 735, 735–737, 737
 surface electric potential of, 761, 761–762
- Electrostatic force. *See* Electric force
- Electrostatic precipitators, 765–766, 766
- Electrostatics, applications of, 765, 765–766, 766
- Electroweak force, 1469, 1470

- Electroweak theory, **1467**–1468
- Elements. *See also* Periodic table of the elements
- absorption spectroscopy of, **1297**–1298, *1298*
 - ionization energy *vs.* atomic number, *1321*, 1321–1322
 - origin of, 1387
- Ellipse, 395, *395*, **A-10**, *A-10*
- Elliptical orbits, 395–396, *396*, 403
- emf (**\mathcal{E}**), **833**–836, *834*
- back, 952–953, 971, 973
 - induced, 935–939, *936*, *937*, *938*, 970 (*See also* Induction)
 - motional, **939**–944, *940*, **941**, *942*, *944*–*947*, *945*–*947*
 - self-induced, 970–**971**, 972
- Emissions
- line width of, 1258
 - spontaneous, **1325**, *1325*
 - stimulated, **1325**–1327, *1326*
- Emission spectroscopy, **1297**–1299, *1298*, 1322–1325
- Emissivity (ϵ), **613**, 1234–1235
- Endothermic reactions, **1405**
- Energetically favorable bonds, **1342**
- Energy (E), 177–201. *See also* Conservation of energy; Internal energy; Kinetic energy (K); Potential energy
- atomic cohesive
 - of covalent solids, 1355, *1355t*
 - of ionic solids, **1353**
 - in capacitor, 786, 786–790, 787, 976
 - carried by electromagnetic waves, 1039–1042
 - as currency of nature, 214
 - dark, in Universe, 1474
 - definition of, 177
 - electrical, mechanical analogies to, 980–982, 981, 984–985, *985t*
 - entropy and, 672
 - equipartition theorem for, **630**, *635*–*637*
 - in inductor, 976–978
 - ionic cohesive, of ionic solids, **1353**
 - in LC circuit, 976–978, 983, 983–984
 - mass as form of, 1217–1220
 - mechanical (E_{mech}), **198**, 216
 - conservation of, 198, **216**–217, 218, 221, 314
 - nonconservative forces and, 227–231
 - in simple harmonic motion, 458–461, *459*, *460*
 - total, in orbits, 403
 - transformation into internal energy, *196*, 196–197, 216–217, 222–224, 227–231
 - in mechanical waves, 212, 213, 484, *495*, *495*–*497*
 - phase change and, 597–600, *599*
 - planetary and satellite motion and, 402–407
 - quantization of. *See* Energy levels; Quantum mechanics
 - of quantum particle in a box, *1273*, 1273–1274, *1274*, 1276–1277
 - relativistic, 1216–1220, *1217*
 - and resistor
 - delivered, 820–821, 851–852, 1001
 - stored, 976
 - and rolling motion, 318–321
 - and rotational motion, 312–316, 318–321
 - in simple harmonic motion, 458–461, *459*, *460*
 - spreading, and entropy, 672
 - transfer mechanisms for, 212, 212–213, 569, 594, *603*, 603–604
 - in thermal processes, 608–614
 - transformation mechanism for, 197
 - units of, 232, *A-2t*
 - waves as transfer of, 484
 - work as transfer of, 180, 190, 212, *212*
- Energy bar charts, *195*, **196**, *196*, 231, *231*
- Energy density
- of electric field, 1040–1041
 - of electromagnetic wave, 1040–1041
 - of magnetic field, 976–**977**, 1040–1041
- Energy diagrams, 199–200, *200*
- Energy gap, *1361*–*1363*, *1361t*, **1362**–1364
- Energy-level diagrams, **636**–637, *637*, **1236**–1237, *1237*, 1274, *1274*
- molecular, 1349, *1350*
- Energy levels
- allowed, Schrödinger's equation and, 1278
 - band theory of solids, *1359*, 1359–1361, *1360*
 - excited states, *1273*, **1273**–1274, *1274*
 - forbidden energies, 1360, *1360*
 - ground-state, *1273*, **1273**–1274, *1274*
 - quantization of, 636–637, *637*, **1236**–1237, *1237*, 1273, *1273*, 1274, *1274*
 - in Bohr model, 1300–1305, *1302*, *1303*, 1311
 - in quantum model, 1306–1308
 - of simple harmonic oscillator, 1287, *1287*
 - splitting of, in systems of atoms, *1359*, 1359–1361, *1360*
 - thermal excitation and, 639, 639–640
- Energy reservoir, 602–603
- Energy spreading, and entropy, 672
- Energy states of molecules, 1344–1349, *1345*, *1348*
- and molecular spectra, 1349–1352, *1350*, *1351*
- Engines. *See also* Motors
- Carnot, **660**–665, *661*, *662*
 - entropy and, 673–674, *677*–*678*
 - diesel, 638–639, 655, 666–667
 - efficiency of, 655–656
 - gasoline, 655, *665*, 665–666, *666*
 - heat, *654*, **654**–656, *655*
 - of locomotive, 654, *654*
 - power of, 656
 - steam, 654, *654*, 664–665
- Enrichment, of uranium, 1422, 1423
- Entropy (S), 667–671, **669**
- in adiabatic free expansion, 672, 674, *674*, 675–676, *677*
 - Carnot engine and, 673–674, *677*–*678*
 - change in, and energy spreading, 672
 - change in, for thermodynamic systems, 671–678
 - choice, of microstates, 668–671
 - history of concept, 667–668
 - missing information, of microstates, 668–671
 - probability, of microstates, 668–671
 - in reversible and irreversible processes, 672–678
 - and second law of thermodynamics, 676–678
 - as state variable, 667, 676
 - thermal conduction and, 674–675, *677*
 - for thermodynamic systems, 670–671
 - uncertainty, of microstates, 668–671
- Envelope
- of oscillatory curve, 469, *469*
 - of shock wave front, 522, *522*
- Environment, **178**
- Equation(s). *See also* Kinematic equations
- in algebraic form, solving of, 13
 - Bernoulli's equation, 430–433, **431**
 - coefficients of, **A-7**
 - Compton shift equation, **1247**–1248
 - conservation of energy equation, **213**–215, 275
 - continuity equation for fluids, 428, **428**–430
 - differential, 163
 - dimensional analysis of, 8–9
 - Galilean transformation equations, **97**, **1194**–**1195**
 - lens-makers', **1105**
 - linear, *A-7*–*A-9*
 - linear wave equation, 497–**498**
 - Lorentz space–time transformation equations, **1210**–1212
 - Lorentz velocity transformation equations, 1212–1214, *1213*
 - Maxwell's equations, **1033**–1034, 1196
 - mirror equation, 1094–1095
 - photoelectric effect, 1243
 - quadratic, **A-7**
 - for rotational motion, 314*t*
 - Schrödinger equation, 1269, **1277**–1279, 1280
 - and quantum model of hydrogen atom, 1306–1308
 - of state for ideal gas, **578**–579
 - thin lens equation, **1105**

- for translational motion, 314*t*
- units, inclusion of, 10
- Equation of continuity for fluids, 428, 428–430
- Equation of state for ideal gas, 578–579
- Equilibrium, 363–372
 - electrostatic. *See* Electrostatic equilibrium
 - neutral, 200
 - particle in equilibrium model, 120–121, 121, 122–123
 - and potential energy, 199–201, 200
 - rigid object in equilibrium model, 364–365, 366–372
 - problem-solving strategies for, 366–367
 - rotational, 364–365
 - stable, 200, 200
 - static, conditions for, 364–365
 - unstable, 200, 200
- Equilibrium position, 451, 451
- Equipartition of energy theorem, 630, 635–637
- Equipotential surfaces, 750, 750, 755, 755–756, 762
- Equivalence, principle of, 1222
- Equivalent resistance (R_{eq}), 836–837, 837, 838–839, 841–842
- Eris, 398
- Escape speed (v_{esc}), 404, 404–405, 405*t*
 - black holes and, 406
 - molecular speed distribution and, 641–642
- Estimation, 10–11
- Eta (η) [particle], properties, 1454*t*
- Ether, 1195–1198
- Ether wind theory, 1195–1198
- Euler's number (e), 163, A–9
- European Council for Nuclear Research, 1203
- European Laboratory for Particle Physics (CERN), 868, 1191
- European Organization for Nuclear Research (CERN), 868, 1191, 1454, 1465, 1468
- European Space Agency, 1471
- Evaporation, 642
- Event horizon, 406, 406
- Excimer lasers, 1328
- Excited states, 1273, 1273–1274, 1274
- Exclusion principle, 1318–1320, 1319
 - bosons and, 1370
 - quarks and, 1465–1466
- Exhaust speed, 278
- Exhaust stroke, 665, 666
- Exothermic reactions, 1405
- Expansion joints, 573, 573
- Expectation value, 1270, 1271, 1275–1276
- Exponents, A–4
 - rules of, A–6–A–7, A–6*t*
 - and uncertainty, A–20–A–21
- Exposure times, of camera, 1113–1115
- Extraordinary (E) rays, 1179, 1179
- Extrinsic semiconductors, 1364
- Eye(s)
 - anatomy of, 1115, 1115–1116
 - conditions of, 1116–1117, 1117
 - laser-based medical applications for, 1328
 - resolution of, 1167–1168
 - vision in, 1115–1116, 1116
- Eyepiece, 1119, 1119, 1120, 1120
- Factoring, A–7
- Fahrenheit scale, 572, 573
- Farad (F), 778
- Faraday, Michael, 689, 699, 708, 778, 869, 935, 936, 936, 937
- Faraday's law of induction, 935–937, 1033–1034, 1035–1036
 - applications, 938–939
 - general form, 948
- Far point, of eye, 1116
- Farsightedness (hyperopia), 1116, 1117
- Femtometer (Fermi; fm), 1383
- Fermi (femtometer; fm), 1383
- Fermi, Enrico, 1400, 1419, 1422, 1422
- Fermi–Dirac distribution function ($f(E)$), 1356, 1356
- Fermi energy, 1356, 1356–1358, 1356, 1357, 1357*t*
 - insulators, 1361, 1362
 - metals, 1356, 1356–1358, 1357*t*, 1361, 1361
- Fermi National Laboratory (Fermilab), 1455, 1464, 1468
- Fermions, 1370
 - exclusion principle and, 1465–1466
 - quarks as, 1463
 - in Standard Model, 1467
- Ferris wheel, force exerted on rider, 155, 155–156
- Ferromagnetism, 920–921, 921, 921*t*
- Feynman, Richard P., 1452, 1452–1453
- Feynman diagrams, 1452, 1452, 1453, 1454, 1467, 1467
- Fiber optics, 1075–1076, 1076
- Fictitious forces, 158–161, 159, 159, 160, 161
- Field-effect transistor, 1368, 1368–1369
- Field forces, 112, 112, 699. *See also* Electric field; Gravitational field; Magnetic field
- Field particles (exchange particles; gauge bosons), 1448, 1449*t*, 1451–1453, 1452, 1453
 - in Standard Model, 1467–1468, 1468
- Films, thin, interference in, 1144, 1144–1147, 1145
 - problem-solving strategy, 1146
- Filter circuits, 1018–1020, 1018–1020, 1019
- Finalization of problem-solving, 46, 47. *See also* Problem-solving strategies
- First law, Kepler's, 395–396
- First law of motion, Newton's, 113–114
- First law of thermodynamics, 603–604, 653
 - applications, 604–608
- First-order maximum, 1138, 1170, 1171
- Fish
 - apparent image of, 1103, 1103–1104
 - buoyancy adjustment in, 424–425
 - view from underwater, 1075, 1075
- Fission, 1419–1421, 1420
 - energy released in, 1420–1421
 - nuclear binding energy and, 1386
- Fission fragments, 1420, 1420
- Fission reactors, 1219–1220, 1421–1425
 - advantages of, 1425
 - control of, 1423, 1423–1424
 - core design, 1423, 1423–1424
 - design of, 1423, 1423
 - history of, 1422, 1422
 - safety and waste disposal, 1424–1425
- Fizeau, Armand H. L., 1060, 1060–1061
- Flash drives, 1267
- Flavors, of quarks, 1462, 1463
- Flow
 - ideal fluid flow model, 427–428, 428
 - steady (laminar), 427, 427–428, 428
 - turbulent, 427, 427
- Flow rate (volume flux), 428
- Fluid(s), 417. *See also* Gas(es); Liquid(s)
 - continuity equation for, 428, 428–430
 - ideal flow model, 427–428, 428
- Fluid dynamics, 427–434
- Fluid mechanics, 417–434
 - Bernoulli's equation, 430–433, 431
 - dynamics, 427–434
 - pressure, 417, 417–419, 418
- Fluorine (F)
 - electronic configuration, 1319, 1321
 - isotopes, 1396*t*
- Flux
 - electric, 725, 725–728, 726, 727
 - net, 727
 - through closed surface, 726–728, 727, 728 (*See also* Gauss's law)
 - units of, 726
 - zero flux, 730
 - magnetic, 917
 - electric field induced by change in, 947, 947–949
 - Gauss's law for, 916–919, 918
 - volume (flow rate), 428
- f -number
 - of camera lens, 1114–1115
 - of human eye, 1116
- Focal length (f)
 - of combination of thin lenses, 1111
 - of compound microscope, 1119, 1119
 - of concave mirror, 1094, 1095
 - sign conventions, 1096*t*
 - of thin lens, 1105, 1105, 1106, 1106*t*, 1107

- Focal point(s)
 of concave mirror, **1094**, *1095*
 of thin lens, *1105*, *1105*
- Focus, of ellipse, **395**, *395*
- Food
 analysis of heavy metal contamination in, *1298*
 irradiating to preserve, *1436–1437*, *1437*
- Food and Drug Administration, U.S., *1437*
- Foot (ft), *4*, *5*
- Forbidden energies, *1360*, *1360*
- Forbidden transitions, *1322*
- Force(s) (\vec{F}), **111–113**, *112*. *See also* Electric force; Friction; Fundamental forces; Gravitational force; Magnetic force; Normal force; Strong force; Weak force
 and acceleration, *32–33*, *114*, *115–117*
 action, *119*, *119*
 applied (\vec{F}_{app}), *186–187*
 binding forces, atomic, *460*, *460*
 buoyant (\vec{B}), *423–427*, **424**, *424*, *425*
 centrifugal, *159*, *159*, *160*
 on charged object, *700*
 on charged particle, *694–699*
 color force, **1466**
 conservative, **197–198**
 and potential energy, *197*, *198–199*
 work done by, *197–198*, *198–199*
 contact, *112*, *112*, *126*
 coplanar, *364*
 Coriolis, *159–160*, *160*
 dipole–dipole force, *1343*
 dipole–induced dipole force, *1343*
 dispersion force, *1343*
 fictitious, *158–161*, **159**, *159*, *160*, *161*
 field, *112*, *112*, *699*
 of kinetic friction (\vec{f}_k), *130*, **131**
 line of action of, *300*, *301*
 measurement of, *112–113*, *113*
 net ($\Sigma \vec{F}$), **116**, *314t*
 momentum and, *252–253*
 particle under a net force model, *121*, *121*, **122**, *123–130*
 on system of particles, *272*
 time-averaged, *253*, *253–254*
 nonconservative, **198**
 friction as, *196*, *196–197*, *222–227*
 and mechanical energy, *227–231*
 work done by, *198*, *198*
 in nonuniform circular motion, *156–158*, *157*
 on particle in electromagnetic field, *1034*
 and potential energy, *199*
 and pressure, *418*
 reaction, *119*, *119*
 relativistic, *1215*
 restoring, *186*, **451**
 in simple harmonic motion, *451*, *451*
 spring force (F_s), *185*
 of static friction (\vec{f}_s), *130*, *130–131*
vs. torque, *301*
 in uniform circular motion, *151*, *151–156*
 units of, *116*, *A–1t*
 as vector quantity, *112–113*, *113*
 viscous, *162*, *162–164*, *427*
 work done by
 conservative force, *197–198*, *198–199*
 constant force, *178–181*, *179*, *180*, *183*
 gravitational force, *197*, *215*
 nonconservative force, *198*, *198*
 varying force, *183–188*, *184*
- Force constant (spring constant; k), *185–186*, *187*, *187–188*, *220–221*, *456*
- Forced convection, *613*
- Force diagram, **119**, *119*
- Forced oscillation, *469–471*, *470*
- Forward bias, *1366*, *1366*
- Fossil fuels, and greenhouse effect, *1351*
- Fourier series, **553**
- Fourier's theorem, **553–554**
- Fourier synthesis, *554*, *554*
- Fourier transform, *1148–1149*
- Fourier transform infrared (FTIR) spectroscopy, *1148–1149*
- Fovea, *1115*, *1116*
- Fractional uncertainty, **A–20**
- Fractions, multiplying, dividing, and adding, *A–6*
- Frames of reference. *See* Reference frames
- Francium (Fr), electronic configuration, *1321*
- Franklin, Benjamin, *691*
- Fraunhofer diffraction pattern, **1161–1165**, *1162*, *1164*
- Free-body diagram, **119**, *119*
- Free-electron theory of metals
 classical, *816–818*
 quantum, *1355–1359*, *1356*, *1357*
- Free fall, **40–43**
 conservation of mechanical energy in, *216*, *216*, *218*, *218*
 gravitational force and, *41–43*, *391–392*, *391t*
 and projectile motion, *84–91*, *85*
 resistive forces in, *161–167*
- Free-fall acceleration, *41–43*
 measurement of, *465*
- Frequency (f)
 angular (ω)
 of AC voltage, *999*
 of electromagnetic waves, *1037*
 of oscillation in *LC* circuit, *982*
 in simple harmonic motion, **453**, *454*, *455*, **456**, *462–463*
 of simple pendulum, *465*
 of sound wave, *509*
 of wave, **488**, **491**
 of electromagnetic waves, *1037–1038*
- fundamental (f_1), **542–543**
 of light
 particle model and, *1249*
 and photoelectric effect, *1243–1244*, *1244*
 natural (ω_0), **468**, *542*, *546*, *547–548*
 of *LC* circuit, *982*, *1013*
 of normal modes, *542*
 of particle, *1250*
 of photon emitted by hydrogen atom, *1301*, *1303*, *1304*
vs. pitch, *553*
 quantization of, *533*, **541**, *542*, *547*, *548*, *1276*
 resonance (ω_0), **470**, *470*, **546**, *548*
 of series *RLC* circuit, **1013–1015**, *1014*
 of simple harmonic motion, **454**, **456**
 of sound wave, and hearing, *516–517*, *517*
 of wave, **487–488**, **491**
- Fresnel, Augustin, *1161*
- Fresnel lens, *110*, *1107*
- Friction, *130*, **130–135**. *See also* Viscosity
 on atomic level, *131*, *222*, *222*
 automobile tires and, *153–154*
 coefficient of kinetic friction (μ_k), **131–135**, *132t*, *230–231*
 coefficient of static friction (μ_s), **131–133**, *132t*, *154*
 direction of force, *131*
 kinetic, *130*, **131**, *222*, *222–227*
 and mechanical energy, *227–231*
 as nonconservative force, *196*, *196–197*, *222–227*
 rolling, *318*
 static, *130*, *130–131*
 and transformation of mechanical
 into internal energy, *196*, *196–197*, *216–217*, *222–224*, *227–231*
 work done by, *196–197*, *198*, *198*, *222*
- Fringes, **1134–1140**, *1135*, *1136*, *1137*, *1142–1145*, *1147–1148*, *1161*, *1161*, *1170*, *1170*, *1171*
- Frisch, Otto, *1419*
- FTIR. *See* Fourier transform infrared (FTIR) spectroscopy
- Fuel cells, *1*
- Fuel elements, of reactor, *1422*, **1423**, *1423*
- Fukushima nuclear accident (Japan), *1424*
- Fuller, R. Buckminster, *1354*
- Functions, **A–14**
- Fundamental, **542–543**
- Fundamental forces, *112*, *1448*
 electromagnetism as, *690*
 evolution of, at origin of Universe, *1469*, *1470*
 field particles for, **1448**, *1449t*, *1451–1453*, *1452*, *1453*

- in Standard Model, *1468*
 string theory and, *1475*
 strong force as, *1454, 1464–1465*
 Fundamental frequency (f_1), **542–543**
 Fundamental quantities, *5*
 Fusion, latent heat of, **598**, *598t*
 Fusion, nuclear, **1425–1432**
 critical ignition temperature (T_{ignit}),
 1428, 1428–1429
 energy released in, *1425–1426,*
 1427–1428
 nuclear binding energy and, *1386*
 in stars, *1425*
 tunneling and, *1283*
 Fusion reactors, *1220, 1418, 1426,*
 1426–1429
 advantages and disadvantages of, *1432*
 design of, *1431–1432, 1432*
 inertial confinement of plasma,
 1431, 1431
 magnetic confinement of plasma,
 1429, 1429–1430

 Gabor, Dennis, *1172*
 Galaxy clusters, *407*
 Galilean relativity, *1193, 1193–1196, 1194*
 limitations of, *1195–1196*
 Galilean transformation equations, **97**
 space–time transformation equations,
 1194–1195
 velocity transformation equation, *97,*
 1195, 1196
 Galilei, Galileo, *40, 40, 114, 1059*
 γ (gamma, relativity), *1201,*
 1201–1202, 1201t
 γ (gamma, thermodynamics), *633t,*
 634, 666
 Gamma (γ) decay, *1391, 1391,*
 1403–1404, 1404
 decay pathways, *1404t*
 and food preservation,
 1436–1437, 1437
 and radiation damage, *1433, 1434t*
 and radiation therapy, *1436*
 Gamma rays, **1046, 1046,** *1380, 1403*
 Gamow, George, *1399*
 Gas(es). *See also* Ideal gas; Molar specific
 heat; Pressure
 adiabatic free expansion, **604–605**
 entropy in, *672, 674, 674,*
 675–676, 677
 as irreversible process, *659,*
 659–660
 atomic spectra of, *1297–1299, 1298,*
 1322–1325
 characteristics of, *417*
 entropy and, *672, 674, 674,*
 675–676, 677
 and first law of thermodynamics,
 603–607
 indices of refraction in, *1067t*
 internal energy of, *635–637, 636*
 kinetic theory of, **627–643**
 noble, *1320–1321*
 van der Waals bonding in, *1343*
 PV diagrams of, **602, 602**
 specific heat, *594t*
 speed of molecules in, *639–643, 641*
 thermal conduction in, *609t*
 work and heat in thermodynamic
 processes, *601, 601–603,*
 602, 603
 Gasoline, average expansion
 coefficient, *575t*
 Gasoline engines, *665, 665–666, 666*
 Gate, of field-effect transistor, *1368, 1368*
 Gauge bosons (field particles), **1448,**
 1449t, 1451–1453, 1452, 1453
 in Standard Model, *1467–1468, 1468*
 Gauge pressure, **423**
 Gauss (G), *873*
 Gauss, Karl Friedrich, *729*
 Gaussian surface
 definition of, *728, 728*
 flux through. *See* Gauss's law
 as imaginary surface, *731*
 Gauss's law, *728, 728–730, 729,*
 730, 1033
 applications of, *731–735*
 in magnetism, *916–919, 918, 1033*
 problem-solving strategy for, *731*
 Gauss's probability integral, *A–19t*
 Gay-Lussac's law, *578*
 GCFI. *See* Ground-fault circuit
 interrupter (GCFI)
 Geiger, Hans, *1299, 1380*
 Geim, Andre, *1354*
 Gell-Mann, Murray, *1461,*
 1461–1462, 1463
 General problem-solving strategy, *45–47*
 General theory of relativity. *See*
 Relativity, general
 Generators, electric
 AC, *949–951, 950*
 DC, *951, 951–952*
 Genetic radiation damage, *1433*
 Geocentric model, *394*
 Geometric optics. *See* Ray optics
 Geometric shapes, area and volume
 of, *A–11t*
 Geometry, *A–10–A–11*
 Geosynchronous satellites, *399,*
 399–400, 403–404
 Gerlach, Walter, *1315, 1315–1316*
 Germanium (Ge)
 energy-gap value, *1362t*
 resistivity, *814t*
 as semiconductor, *692*
 structure of, *1352*
 Germer, L. H., *1250*
 Gilbert, William, *869*
 Ginza district, Tokyo, *1296*
 Glancing collisions, *264, 264–265,*
 266–267
 Glashow, Sheldon, *1467*
 Glass
 average expansion coefficient, *575t*
 birefringent qualities, *1179*
 dielectric constant and dielectric
 strength of, *791t*
 index of refraction, *1067t*
 resistivity, *814t*
 specific heat, *594t*
 thermal conductivity, *609t*
 Global warming, greenhouse effect and,
 1351–1352
 Gluinos, *1476*
 Gluons, *1448, 1449t, 1466–1467, 1467*
 GLV. *See* Grating light valve (GLV)
 Goepfert-Mayer, Maria, *1389–1390, 1390*
 Gold (Au)
 density, *419t, 426*
 Fermi energy, *1357t, 1358*
 isotopes, *1397t*
 latent heats of fusion and
 vaporization, *598t*
 resistivity, *814t*
 specific heat, *594t*
 speed of sound in, *512t*
 structure of, *6, 6, 7*
 thermal conductivity, *609t*
 Golmud Solar Park, *1367*
 Gordon, Jeff, *150*
 Goudsmit, Samuel, *1315, 1316*
 Grand Tetons, *1057*
 Graphene, **1354–1355**
 Graphical representation, *22, 22, 23*
 Graphite
 microscopic view of surface, *1284*
 structure of, *1354*
 Grating(s), diffraction. *See* Diffraction
 grating(s)
 Grating light valve (GLV),
 1171–1172, 1172
 Gravitation, *388–407. See also* Kepler's
 laws; Planetary motion
 Newton's law of, **389–391, 392**
 Newton's work on, *388, 389, 392*
 Gravitational constant, universal (G),
 389, 1220
 Gravitational field, **392–394, 393**
 deflection of light by, *1198, 1222,*
 1222–1223
 vs. electric field, *749, 749*
 Gravitational force (\vec{F}_g), **117–118,**
 389–391
 altitude and, *391–392, 391t*
 black holes, **405–406, 406, 1223**
 as conservative force, *197*
 discovery of, *388, 389*
 distance and, *389–390*
 evolution of, at origin of Universe,
 1469, 1470
 as field force, *112, 390*
 field particles for, *1448, 1449t,*
 1454, 1468

- Gravitational force (\vec{F}_g) (*continued*)
 and free-fall acceleration, 41–43, 391–392, 391*t*
 as fundamental force, 112, 1448
 and general relativity, 1220–1223
 normal force and, 119, 119
 and orbit shape, 396
 and orbit speed, 406, 406–407, 407
 and projectile motion, 84–91
 on rigid object, 365, 365–366
 in Standard Model, 1468, 1468
 and weight, 117–118
 work done by, 197, 215
- Gravitational lens, 1222, 1222
- Gravitational mass, 118
- Gravitational potential energy (U_g), 192–194, 400, 400–402, 401
- Gravitational waves, efforts to detect, 1149
- Gravitons, 1448, 1449*t*, 1454, 1468
- Gravity, center of, 269, 269
 of rigid object, 365, 365–366, 366
- Gray (Gy), 1434, 1434*t*
- Greek philosophers, on nature of matter, 6
- Greenhouse effect, and global warming, 1351
- Ground, 693
 neutral wire, in household wiring, 853, 853
 symbol for, 693
 three-pronged electrical cords, 854, 854
- Ground-fault circuit interrupter (GFCI), 854–855, 938, 938
- Ground state, 637, 1273, 1273–1274, 1274
- Ground state energy, 1274, 1274
- Group I elements, 1320, 1321
- Group speed, of wave packet, 1254–1255
- Guitar, electric, 938, 938
- Gujarat Solar Park, 1367
- Gurney, R. W., 1399
- Gyroscopes, 350–352, 351, 352
- Hadrons, 1454, 1455, 1466
 properties, 1454*t*
 structure of, 1462, 1462
- Hafele, J. C., 1202
- Hahn, Otto, 1301, 1419
- Half-life ($T_{1/2}$)
 for radioactive decay, 1392–1394, 1399
 of RC circuit, 851
 of RL circuit, 976
 of selected isotopes, 1396*t*–1397*t*
- Half-power points, 1014, 1014
- Half-wave antenna, electromagnetic wave production by, 1044, 1044–1045
- Half-wave rectifier, 1018, 1018–1019
- Hall, Edwin, 890
- Hall coefficient, 891
- Hall effect, 890, 890–892
- Halley's Comet, orbit of, 395, 396
- Hall field, 889
- Hall voltage (ΔV_H), 890, 890–891
- Halogen lightbulbs, 1321
- Halogens, 1321
- Hand warmers, commercial, 600
- Harmonics, 542, 542–543, 547, 548, 553, 554
- Harmonic series, 542, 547
- Haumea, 398
- HCl molecule, absorption spectrum, 1350, 1351
- Head to tail method, for adding vectors, 62, 62–63, 64–65
- Hearing
 beating, 550–552, 551, 551
 Doppler effect, 517, 517–521, 518, 519
 frequency and, 516–517, 517
 loudness, 516–517, 517
 music *vs.* noise, 550, 553
 sound damage to, 515
 sound level, in decibels, 515–516, 515*t*
 threshold of hearing, 514, 515, 516, 517
 threshold of pain, 514, 515, 516–517, 517
- Heat (Q), 591. *See also* Thermal conduction
 electric heaters, 822–823
 as energy transfer, 212, 213, 608
 entropy and, 671–676
 history of concept, 591–592
vs. internal energy and temperature, 591
 latent (L), 597–601
 mechanical equivalent of, 592, 592–593
 specific (c), 593–597, 594, 594*t*
 in thermodynamic processes, 602–603, 603
 units of, 591–592
- Heat capacity (C), 593–594
- Heat death of Universe, 678
- Heat engines, 654, 654–656, 655
- Heat pumps, 656–659, 657, 661, 663
- Heat rays, 1045
- Heat sinks, 821
- Heavy metal contamination of food, analysis of, 1298
- Height (h), maximum, of projectile, 85, 85–87
- Heisenberg uncertainty principle, 1256–1258
 and conservation of energy, 1278, 1452–1453
- Heisenberg, Werner, 1234, 1256, 1257, 1267, 1278
- Heliocentric model, 394
- Helium (He)
 average expansion coefficient, 575*t*
 density, 419*t*
 discovery of, 1297–1298
 electronic configuration, 1319, 1319, 1320, 1321
 isotopes, 1396*t*
 latent heats of fusion and vaporization, 598*t*
 mass of nucleus, 1382*t*
 molar specific heat, 633*t*
 speed of sound in, 512*t*
 thermal conductivity, 609*t*
- Helium–neon gas laser, 1327, 1327
- Henry (H), 971, 971, 979
- Henry, Joseph, 689, 869, 935, 971
- Hertz (Hz), 454, 488
- Hertz, Heinrich, 1034–1035, 1035, 1059
- Higgs boson, 1447, 1468
- Higher-phase material, 597
- Hole, in valence band, 1362, 1363
- Holography, 1172, 1172–1174, 1173
- Home insulation, 611–612, 611*t*
- Hooke's law, 185, 187, 199, 451, 456
- Horizontal range (R), of projectile, 85, 85–87, 90–91
- Horsepower (hp), 232
- Hose, garden, speed of water from, 428, 428–429
- Household wiring, 839, 852–853, 853
 electrical safety, 853–855, 854
- Hubble, Edwin P., 1210, 1471–1472
- Hubble constant, 1472
- Hubble's law, 1472
- Hubble Space Telescope, 388, 1160, 1169, 1169, 1367
- Humason, Milton, 1471–1472
- Hummingbird, feather color of, 1134
- Hund's rule, 1319, 1320
- Huygens, Christian, 466, 1059, 1059, 1060, 1071
- Huygens's principle, 1071, 1071–1072
- Hybrid engines, 952, 952
- Hydraulic press, 420, 420–421
- Hydrochloric acid molecule, 701
- Hydrodynamica* (Bernoulli), 430
- Hydrogen (H)
 absorption spectrum, 1297, 1298
 density, 419*t*
 electronic configuration, 1319, 1321
 emission spectrum, 1298, 1298–1299
 frequency of photon emitted from, 1301, 1303, 1322
 as fuel, 1
 isotopes, 1381, 1396*t*
 molar specific heat, 633*t*, 636, 636
 speed of sound in, 512*t*
 thermal conductivity, 609*t*
- Hydrogen atom(s)
 allowed transitions, 1322, 1322
 Bohr (semiclassical) model of, 627, 1300, 1300–1305, 1302, 1303, 1311
 covalent bonding between, 1342, 1342–1343
 electric and gravitational force within, 695
 energy level diagram for, 1303, 1303, 1322, 1322

- importance of understanding, 1296–1297
- mass of, 1382*t*
- quantum model of, 627, 1306–1308
- quantum numbers, 1306–1308, 1307*t*
- for $n = 2$ state, 1317, 1317*t*
- physical interpretation of, 1311–1317
- radial probability density function, 1309, 1309–1311, 1311
- space quantization for, 1314
- wave function (ψ) for, 1308–1311
- ground state, 1308
- 2*s* state, 1311
- Hydrogen bonding, **1343**–1344, 1344
- Hydrogen gas, molar specific heat of, 1287–1288
- Hydrogen molecules, exclusion principle and, 1343
- Hyperbola, rectangular, **A–11**, A–11
- Hyperopia (farsightedness), **1116**, 1117
- I^2R loss, 821–822
- Ice
- density, 419*t*
- hydrogen bonding in, 1343–1344
- index of refraction, 1067*t*
- specific heat, 594*t*
- thermal conductivity, 609*t*
- Icebergs, 427, 427
- Ice point of water, 571, 572
- Ideal absorber, **613**
- Ideal fluid flow model, **427**–428, 428
- Ideal gas, **578**–580
- adiabatic process for, 637–639, 638
- equation of state for, **578**–579
- internal energy of, 630, 632
- isothermal expansion of, 606, 606
- macroscopic description, 578–580
- molar specific heat of, 631–634, **632**
- molecular model of, 627, 627–631
- properties of, 627
- Ideal gas law, 578–579
- Ideal gas model, **578**–580
- Ideal solenoid, 915–916, 916
- IKAROS (Interplanetary Kite-craft Accelerated by Radiation of the Sun), 1043
- Image(s), **1091**, 1091
- real, **1091**
- virtual, **1091**
- Image distance (q), **1091**, 1091, **1093**, 1094, 1098–1099
- for refracted images, 1101, 1103
- sign conventions for, 1095–1096, 1096, 1096*t*, 1101*t*, 1106*t*
- Image formation. *See also* Lens(es); Resolution
- angular magnification, 1118, **1118**–1119, 1120, 1121
- in concave mirrors, 1093, 1093–1095, 1094, 1098–1099
- ray diagrams, 1096, 1097
- in convex mirrors, 1095, **1095**–1096, 1099–1100, 1100
- ray diagrams, 1096–1098, 1097
- in flat mirrors, 1090–1093, 1091, 1092
- lateral magnification
- lenses, 1106, 1108–1110, 1111–1112, 1119–1120
- microscope, 1119–1120
- mirrors, **1091**, 1094, 1098–1099, 1100
- sign conventions, 1096*t*
- in microscopes, 1119–1120
- ray diagram analysis of
- for mirrors, 1096–1098, 1097
- for thin lenses, 1106, 1106–1112
- by refraction, 1100, 1100–1104, 1101, 1101*t*, 1102
- sign conventions
- reflection, 1095–1096, 1096, 1096*t*
- refraction, 1101, 1101*t*
- for thin lens, 1106, 1106, 1106*t*
- in spherical mirrors
- concave, 1093, **1093**–1095, 1094, 1098–1099
- convex, 1095, **1095**–1096, 1099–1100, 1100
- in telescopes, 1120–1122, 1121, 1122
- Image height (h'), sign conventions for, 1096*t*, 1101*t*, 1106*t*
- Impedance (Z), **1009**, 1010
- Impedance matching, 1016
- Impending motion, 131
- Impulse (\bar{I}), 253, **253**–254
- Impulse approximation, **254**–255
- Impulse–momentum theorem
- for angular impulse and momentum, 341
- in deformable systems, 275
- and nonisolated system model for momentum, 254
- for particle, **254**–255
- for system of particles, 273
- Impulsive force, 254
- Incoherent light sources, **1136**
- Incompressible fluid, 427
- Indefinite integrals, **A–16**, A–18*t*–A–19*t*
- Independent-particle model of nucleus. *See* Shell model of nucleus
- Index of refraction (n), **1066**–1068, 1067*t*, 1070
- birefringent materials, 1179, 1179*t*
- and polarizing angle (Brewster's law), **1178**
- and wavelength, 1067, 1067, 1072, 1072–1073, 1073
- Induced polarization, 795, 795–797, 796
- Inductance (L), **971**–972
- mechanical analogy to, 980–982, 981, 984–985, 985*t*
- mutual, 978–980, **979**, 979
- units of, 971
- Induction, 935–939, 936, 937, 938
- charging objects by, 692, **692**–693
- eddy currents, 953, **953**–955, 954
- electric field created by, 947, 947–949
- Faraday's law of, 935–**937**, 1033–1034, 1035–1036
- applications, 938–939
- general form, 948
- in generators and motors, 949–953
- Lenz's law, 944, **944**–947
- motional emf, **939**–944, 940, **941**, 942, 944–947, 945–947
- mutual, 978–980, **979**, 979
- self-induction, 970–971, 972
- Inductive reactance, **1003**, 1004, 1009–1010
- Inductor(s), **973**. *See also* RLC circuits; RL circuits
- in AC circuits, 1002, 1002–1004, 1003, 1011
- circuit symbol for, 973
- energy stored in, 976–978
- Inelastic collisions, **257**, 265–266, 266
- perfectly inelastic, **257**, 257, 261–262
- Inelastic scattering, 1405
- Inert gases, 1320–1321
- Inertia, **114**. *See also* Moment of inertia and general relativity, 1220–1221, 1221
- Inertial confinement, of plasma, **1431**, 1431
- Inertial mass, **118**, 118
- Inertial reference frames, **113**–114
- Infrared waves, **1045**, 1046
- Infrasonic sound waves, 507
- Initial phase angle. *See* Phase constant
- In phase, 536, 536
- Instantaneous acceleration (\vec{a}), 31, **32**–33, 34, **80**
- in uniform circular motion, 92
- Instantaneous angular acceleration (α), **295**–296, 298, 314*t*
- torque and, 302–307
- Instantaneous angular speed (ω), **295**
- Instantaneous current (I), **809**
- Instantaneous power (P), **232**, 313
- Instantaneous speed (v), **26**
- Instantaneous velocity (v_x), 25–27, **26**, 26, **79**–80, 80
- as function of time, 81–82, 82, 83
- of particle under constant acceleration, 36, 36, 37, 38, 44
- Institute for Advanced Studies, Copenhagen, 1301
- Instrumentation. *See also* Clocks; Microscopes; Telescopes; Thermometers
- barometers, 423, 423
- beam splitters, 1147, 1148
- calorimeters, **595**, 595
- colliders, **1468**–1469, 1469
- compasses, 868
- cyclotrons, 881–882, 882

- Instrumentation (*continued*)
 Dewar flasks, 614, 614
 electrostatic precipitators, 765–766, 766
 interferometers, **1147**–1149, 1148, 1196, 1196
 magnetic bottles, 879, 879
 mass spectrometer, 880, **880**–881
 neutrino detectors, 1457, 1457
 open-tube manometer, 423, 423
 seismographs, 485
 synchrotrons, 881
 torsion balance, 694, 694
 Van de Graaff generators, 765, 765
 velocity selector, 880, 880
 Venturi tubes, 432, 432
- Insulation, home, **611**–612, 611*t*
- Insulators
 electrical, **692**
 band theory and, 1361, 1361–1362
 charging of, 693, 693
 surface charge on, 693, 693
 thermal, 609
- Intake stroke, 665, 665–666
- Integral calculus, A-16–A-19
- Integrals
 definite, 44, A-17, **A-17**, A-19*t*
 indefinite, **A-16**, A-18*t*–A-19*t*
- Integrand, A-16
- Integrated circuits, 1369, **1369**–1370
- Integration, 43–45, 44, A-16–A-19
 Gauss's probability integral, A-19
 line integral, 747
 partial, A-17–A-18
 path integral, 747
 surface integral, 726
- Intel microchips, technological improvement in, 1369
- Intensity (*I*)
 of diffraction grating interference pattern, 1170, 1170
 in double-slit interference pattern, 1140–1142, 1142, 1164–1165, 1165
 of electromagnetic waves, 1040, 1041
 of polarized beam (Malus's law), **1177**, 1177
 reference (I_0), 515
 in single-slit interference pattern, 1164, 1164
 of sound waves, 512–517, **513**
- Interference, **534**–538, 535
 beating, 550–552, **551**, 551
 constructive, **534**, 535, 536, 536, 537
 of light waves, 1134–1136, 1135, 1136, **1138**, **1139**, 1140–1142, 1144, 1145, 1161, 1169–1170, 1174, 1174
 destructive, **534**, 535, 536, 536, 537
 of light waves, 1134, 1135, 1135–1136, 1136, **1138**, **1139**, 1140–1142, 1144, 1145, 1162–1163
 of electrons, 1255, 1255–1256, 1256
 of light waves, 1134–1149 (*See also* Diffraction patterns)
 conditions for, 1136, 1138, 1139, 1140–1142, 1144, 1145, 1163, 1169–1170
 constructive, 1134–1136, 1135, 1136, **1138**, **1139**, 1140–1142, 1144, 1145, 1161, 1169–1170, 1174, 1174
 destructive, 1134, 1135, 1135–1136, 1136, **1138**, **1139**, 1140–1142, 1144, 1145, 1162–1163
 diffraction pattern as, 1162–1163
 double-slit experiment (Young), 1134–1137, 1135, 1136, 1137
 double-slit interference patterns, 1134–1142, 1135, 1136, 1142
 multiple slits, 1142, 1142
 Newton's rings, **1145**, 1145
 in thin films, 1144, 1144–1147, 1145
 problem-solving strategy, 1146
 waves in interference analysis
 model, 1137, 1137–1140, **1139**
 mechanical waves, **534**–538, 535, 550–552, 551
 sound waves, 536, 536–538, 1136
 spatial, 551
 temporal, 550–552, 551
 water waves, 1135, 1135
- Interferogram, 1148
- Interferometer, **1147**–1149, 1148, 1196, 1196
- Intergovernmental Panel on Climate Change (IPCC), 1351–1352
- Internal energy (E_{int}), 196, **196**–197, **591**
vs. heat and temperature, 591
 of ideal gas, 630, 632
 of isolated system, 604
 phase change and, 597–600, 599
 as state variable, 601, 604
 of system of molecules, 635, 635–637, 636, 637
 and temperature, 594, 630, 632
 transformation of mechanical energy
 into, 196, 196–197, 216–217, 222–224, 227–231
- Internal resistance, 834, **834**–835
- International Bureau of Weights and Measures, 4
- International Committee on Weights and Measures, 572
- International Space Station, weight of, 394
- International Thermonuclear Experimental Reactor (ITER), 1430
- Interplanetary Kite-craft Accelerated by Radiation of the Sun (*IKAROS*), 1043
- Intrinsic semiconductor, **1362**, 1363
- Invariant mass, **1218**
- Inverse-square law, **389**
- Io, moon of Jupiter, 1060, 1060
- Iodine (I)
 electronic configuration, 1321
 isotopes
 activity of, 1394
 in radiation therapy, 1436
 in radioactive tracing, 1434–1435
- Ion(s), heavy, radiation damage from, 1434*t*
- Ion density (n), **1428**
- Ionic bonding, **1341**–1342, 1342
 in solids, 1352–1354, 1353
- Ionic cohesive energy, of solids, **1353**
- Ionization
 of atom, **1303**
 of cells, by radiation, 1433
- Ionization energy, **1303**
vs. atomic number, 1321, 1321–1322
- Iridescence, 1134
- Iris, of eye, 1115, 1115
- Iron (Fe)
 density, 6, 419*t*
 as ferromagnetic substance, 920
 isotopes, 1396*t*
 resistivity, 814*t*
 specific heat, 594*t*
 speed of sound in, 512*t*
 thermal conductivity, 609*t*
 work function of, 1243*t*
- Irreversible processes, 653–654, **659**–660
 entropy in, 662–668
- Irrotational flow, 427
- Irvine–Michigan–Brookhaven neutrino detection facility, 1457, 1457
- Isobaric process, **605**, 607–608
- Isolated object, 114
- Isolated system
 angular momentum in, 345–350
 conservation of energy in, 215–222
 definition of, 212
 internal energy of, 604
- Isolated system model
 angular momentum version, 345–350, **347**
 energy version, 215–222, **217**
 momentum version, 250–252, **251**, 273
 problem-solving strategies for, 217–218
- Isotherm, 605, 606, 632, 632
- Isothermal expansion of ideal gas, 606, 606
- Isothermal process, **605**
- Isotones, 1389
- Isotopes, **1381**, 1396*t*–1397*t*
- Isotropic material, 574
- Isovolumetric process, **605**
- ITER (International Thermonuclear Experimental Reactor), 1430
- Ixion, 398
- Jacket, of fiber optic cable, 1076, 1076
- Japan, Fukushima nuclear accident in, 1424

- Japan Aerospace Exploration Agency (JAXA), 1043
- Jensen, Hans, 1389–1390, *1390*
- JET (Joint European Torus), 1430
- Jewett, Frank Baldwin, *881*
- Joint European Torus (JET), 1430
- Joule (J), **180**, 192, 592
- Joule, James Prescott, 590, 592, *592*
- Joule heating, 821
- Joules per second (J/s), 232
- JT-60U tokamak (Japan), 1430
- Jumper connection, in holiday lightbulbs, 839–840, *840*
- Junction, **838**
- Junction diodes, 814, *814*, *1365*, **1365**–1366, *1366*
- Junction rule, *843*, **843**–846
- Junction transistor, **1368**
- Jupiter
 - escape speed, *405t*
 - moons of, 1060, *1060*
 - orbit of, *406*
 - planetary data, *398t*
- J/Ψ particle, 1464
- Kamerlingh-Onnes, Heike, 819, 820
- Kao, Charles K., 1076
- Kaons (K), 1454*t*, 1459, *1459*
- KBOs. *See* Kuiper belt objects
- K capture, **1401**–1402
- Keating, R. E., 1202
- Keck Observatory, 1122, *1122*, 1168
- Kelvin (K), 3, 4, **572**
- Kelvin, William Thomson, Lord, *654*
- Kelvin–Planck form of second law of thermodynamics, **655**, 657, 660, 677
- Kelvin scale, **572**, *572*
 - conversion to/from, *572*
- Kepler, Johannes, 395, *395*
- Kepler's laws, **395**–398
 - first, 395–396
 - second, *396*, 396–397
 - third, *397*, 397–398
- Keyboard buttons, 780, *780*
- Kilby, Jack, 1369
- Kilogram (kg), 3, 4–5, 114, 117
- Kilowatt-hour (kWh), **232**
- Kinematic equations, **37**
 - in one dimension, 36–38, 44–45
 - in rotational motion, 296–297, *296t*, *297*, *314t*
 - in two dimensions, 79–82
- Kinematics, 21
 - in one dimension, 21–47
 - in two dimensions, 78–98
 - modeling of, *81*, 81–82, *82*
- Kinesiology, 29
- Kinetic energy (K), **188**–191, *314t*
 - of alpha particle, *1395*, 1395–1398, *1400*
 - of beta particle, 1400, *1400*
 - in elastic collisions, 257
 - of electron, in photoelectric effect, 1241, 1242–1244, *1244*, 1245–1246
 - in inelastic collisions, 257
 - in mechanical waves, 495–496
 - molecular
 - and pressure, 627–629
 - and temperature, 630–631
 - vs.* momentum, 249
 - planetary motion and, 402–403
 - of quantum particle in a box, 1273–1274
 - relativistic, 1216–1220, *1217*
 - in rolling motion, 317–318, *318*
 - rotational (K_R), *311*, **311**–312, 314, *314t*
 - of selected objects, 189*t*
 - in simple harmonic motion, 458–459, *459*, *460*
 - and work. *See* Work–kinetic energy theorem
- Kinetic friction, *130*, **131**, 222, 222–227
 - coefficient of kinetic friction, **131**–135, *132t*, 230–231
- Kinetic theory of gases, **627**–643
- Kirchhoff, Gustav, *844*
- Kirchhoff's rules, **843**–846
 - problem-solving strategy for, 844–845
- Krypton (Kr), electronic configuration, 1320, 1321
- Kuiper belt, 397–398
- Kuiper belt objects (KBOs), 397–398
- Laguerre polynomials, 1359
- Lambda (Λ^0) [particle], 1454*t*, 1455, 1459, *1459*, 1464*t*
- Laminar (steady) flow, *427*, **427**–428, *428*
- Land, E. H., 1176
- Large Electron-Positron Collider (LEP), 1468
- Large Hadron Collider (LHC), 407, *868*, *1191*, 1405, 1464*t*, 1468–1469
- Laser cooling, 1329, *1329*
- Laser diodes, 1328
- Laser fusion, 1431, *1431*
- Laser interferometer gravitational-wave observatory (LIGO), 1149, *1149*
- Laser knife, 1328
- Laser pointers, 1043–1044, 1366
- Lasers
 - applications, *1328*, 1328–1329, *1329*
 - generation of light by, **1326**–1327, *1327*
 - in inertial confinement of plasma, **1431**, *1431*
 - semiconductor, 1366
 - trapping of atoms with, 1329, *1329*
- Lasik eye surgery, 1328
- Latent heat (L), **597**–601
- Latent heat of condensation, 598
- Latent heat of fusion (L_f), **598**, 598*t*
- Latent heat of solidification, 598
- Latent heat of vaporization (L_v), **598**, 598*t*
- Lateral magnification (M)
 - lenses, 1106, 1108–1110, 1111–1112, 1119–1120
 - microscope, 1119–1120
 - mirrors, **1091**, 1094, 1098–1099, 1100
 - sign conventions, 1096*t*
- Laue, Max von, 1174
- Laue pattern, 1174, *1174*
- Law of conservation of baryon number, **1456**
- Law of conservation of electron lepton number, **1458**
- Law of conservation of linear momentum, 277
- Law of conservation of muon lepton number, 1458
- Law of conservation of strangeness, **1460**
- Law of conservation of tau lepton number, 1458
- Law of cosines, A–12
- Law of inertia. *See* First law of motion
- Law of reflection, **1062**, **1065**, *1071*, 1071–1072
 - applications, 1063–1065, *1064*
- Law of refraction, 1068
- Law of sines, A–12
- Law of thermal conduction, **609**–610
- Law of universal gravitation, **389**–391
- Lawrence, E. O., 882
- Laws of motion, 111–135
 - analysis models using, 120–130
 - applications of, 122–130
 - first, **113**–114
 - history of, 2
 - in noninertial reference frames, 158–161, *159*, *160*
 - second, **115**–117
 - analysis models using, 120–130
 - in nonuniform circular motion, 158
 - for particle, 249
 - rotational form of, 302–303, 339, 340–341, **342**–**343**
 - for system of particles, 272
 - in uniform circular motion, 151–156
 - third, **118**–120, *119*
- Laws of thermodynamics
 - first, **603**–604, 653
 - applications, 604–608
 - second, 653–654, 676–678
 - Clausius statement of, **657**, 676
 - entropy statement of, 676
 - Kelvin–Planck form of, **655**, 657, 660, 677
 - zeroth, *569*, **569**–570
- Lawson, J. D., 1428

- Lawson number ($n\tau$), 1428, **1428**–1429, 1430
- Lawson's criterion, 1428, **1428**–1429, 1430, 1431
- LC circuit
 applications, 1034, 1034
 energy stored in, 980–982
 oscillations in, 980, **980**–984, 981, 983, 1013, 1034, 1034
- Lead (Pb)
 average expansion coefficient, 575*t*
 density, 419*t*
 isotopes, 1397*t*
 latent heats of fusion and vaporization, 598*t*
 resistivity, 814*t*
 specific heat, 594*t*
 speed of sound in, 512*t*
 thermal conductivity, 609*t*
 work function of, 1243*t*
- Lederman, Leon, 1464
- Length, 4
 contraction of, in special relativity, **1205**–1206, 1206, 1207–1209, 1209
 proper (L_p), **1205**
 sample values of, 4*t*
 symbol for, 7
 units of, 3, 4, 466, A–1*t*, A–24*t*
- Lennard-Jones potential energy
 function, 201, 201, 459–460, 460, 1341
- Lens(es)
 aberrations in, **1112**–1113, 1113, 1121
 in cameras, 1113, **1113**–1115
 converging
 in cameras, 1113, 1113–1115
 focal points, 1105, 1105
 image formation in, 1106, 1106–1107, 1108, 1108–1109
 magnification by, 1118
 spherical aberration in, 1113, 1113
 for vision correction, 1116, 1117
 diverging
 chromatic aberration in, 1113, 1113
 focal points, 1105, 1105
 image formation in, 1106, 1107, 1109, 1109–1110
 for vision correction, 1117, 1117
 of eye, 1115, 1115, 1116–1117, 1117
 Fresnel, 1107, 1107
 gravitational, 1222, 1222
 lens-makers' equation, **1105**
 power (P) of, **1116**
 shapes, 1106, 1106
 testing of, 1145
 thick, 1104, 1104
 thin, 1104, 1104–1112, 1105
 combination of, 1110–1112, 1111
 magnification by, 1106, 1111
 ray diagrams for, 1106
 sign conventions for, 1106, 1106, 1106*t*
 thin lens equation, **1105**
 Lens-makers' equation, **1105**
 Lenz's law, **944**–947, 945
 Lepton(s), 1454, **1455**
 properties, 1454*t*
 rest energy and charge, 1464*t*
 in Standard Model, 1467–1468, 1468
- Lepton numbers, conservation laws, 1458–1459
- Leucippus, 6
- Lever arm. *See* Moment arm
- Levitation, magnetic, superconductors and, 1370
- Lifetime (τ), of excited state, **1258**
- Lift, **434**, 434
- Light
 coherent sources of, **1136**
 deflection by gravitational field, 1198, 1222–1223, 1223
 early models of, 1058–1059
 incoherent sources of, **1136**
 and life on Earth, 1057
 monochromatic sources of, **1136**
 nature of, 1057, 1058–1059
 particle model of, 1058–1059
 quantization of, 1059
 speed of (c), 4
 measurement of, 1059–1061
 Michelson–Morley experiment, 1196, 1196–1198
 relativity and, 1195–1198, 1196, 1198–1199
 wave model of, 1034–1035, 1037, 1059, 1197
- Light-absorbing diodes, 1366, 1367
- Lightbulbs
 compact fluorescent, 808
 in decorative light strings, 839–840, 840
 failure of, 837
 halogen, 1321
 three-way, 839, 839
 wavelength of radiation from, 1233, 1239
- Light cone, 1207
- Light-emitting diodes (LEDs), 1366, 1367
- Light meter, in camera, 1244
- Lightning, 700, 746
- Light waves
 diffraction of. *See* Diffraction
 dispersion of, **1072**–1074, 1073, 1074
 as electromagnetic radiation, 1034–1035, 1037, 1057, 1059, 1197
 interference of. *See* Interference
 polarization of. *See* Polarization
 reflection of. *See* Reflection
 refraction of. *See* Refraction
 transverse nature of, 1175
 unpolarized, **1175**–1176, 1176
- visible light spectrum, 1045*t*, 1046, **1046**–1047, **1073**, 1073, 1074
- wavelength of
 and color, 1045*t*
 measuring, 1138–1139, 1145, 1147–1148, 1170, 1171
 particle model and, 1249
- LIGO. *See* Laser interferometer
 gravitational-wave observatory
- Limiting angle of resolution, for circular aperture, 1167–1169
- Line(s), equations for, A–7–A–9, A–10, A–10
- Linear charge density (λ), **704**–705
- Linear equations, A–7–A–9, A–10, A–10
- Linear expansion, average coefficient of (α), **574**, 575*t*
- Linearly polarized waves, **1035**, 1035, **1176**
- Linear mass density (λ), 308
- Linear momentum (\vec{p}), 247–250, **248**, 314*t*
 of alpha particle, 1395, 1395–1398
 and collisions in one dimension, 256–264
 and collisions in two dimensions, 264, 264–267
 conservation of, 250–251, **254**, **257**, 277
 of electromagnetic waves, 1042–1044
 impulse and, 253, **253**–254
 in isolated system, 250–252
vs. kinetic energy, 249
 quantization of, 1273
 relativistic, 1214–1216, 1217–1218, 1219
 and rotational motion, 314, 320–321
 of system of particles, **272**
- Linear wave(s), 534
- Linear wave equation, 497–**498**, 1037
- Line integrals, 747
- Line of action, 300, 301
- Lines, equations for, A–7–A–9, A–10, A–10
- Line of stability, 1385, 1385
- Line spectra
 atomic, **1297**–1299, 1298, 1322–1325
 splitting of, in magnetic field, 1304, 1313, 1313–1314
 molecular, 1349–1352, 1350, 1351
 x-ray, 1322, 1322–1325
- Line width of atomic emissions, 1258
- Liquid(s)
 characteristics of, 417
 evaporation of, 642
 indices of refraction in, 1067*t*
 objects falling in, 162, 162–164
 specific heat, 594*t*
- Liquid crystal displays, 1181
- Liquid-drop model of nucleus, **1387**–1389, 1388, 1389

- Lithium (Li)
 electronic configuration, 1319,
1319, 1321
 Fermi energy, 1357*t*
 fusion reactors and, 1431–1432, *1432*
 isotopes, 1396*t*
- Live wire, 853, *853*
- Livingston, M. S., *882*
- Lloyd's mirror, 1143, *1143*
- Load, 834
 matching of, 835–836
- Load resistance, **834**, 835–836
- Locomotive, engine of, 654, *654*
- Logarithms, **A-9**–**A-10**
- Longitudinal waves, *484*, **484**–485, *508*,
 508–509, *509*
- Loop, of standing wave, 542
- Loop rule, **843**–846, *844*
- Lorentz, Hendrik A., 1210
- Lorentz force, 880
- Lorentz force law, **1034**
- Lorentz space–time transformation
 equations, **1210**–1212
- Lorentz velocity transformation
 equations, 1212–1214, *1213*
- Loudness, 516–517, *517*
- Luminous intensity, units of, 3, **A-24t**
- Lyman series, 1299, 1303
- Mach angle, 522
- Mach number, 522
- Macrostate, **668**–670
- Madelung constant (α), **1353**
- Magic numbers, **1389**
- Maglev trains, *689*
- Magnesium (Mg), isotopes, 1396*t*
- Magnet(s)
 polarity of, 868–869, 870
 superconducting, 820, *820*, *868*, *873t*
- Magnetic bottle, 879, *879*
- Magnetic confinement, of plasma, *1429*,
1429–1431
- Magnetic dipole in magnetic field,
 potential energy of, 886–887
- Magnetic dipole moment ($\vec{\mu}$)
 of atoms, *919*, 919–920, *920t*
 of coil, 888
 of current loop, *887*, **887**–888,
889, 919
 of electron, 1312–1313
 nuclear, 1406–1407
- Magnetic energy density, **976**–**977**
- Magnetic field(s) (\vec{B}). *See also*
 Magnetic force
 Ampère's law, 911–915, **912**
 general form of (Ampère–Maxwell
 law), 1031–**1032**, 1033–1034,
 1036–1037
 charge moving in
 applications, 879–882
 magnetic force on, **871**–874, *872*
 nonuniform field, 878–879, *879*
 uniform field, 874–878, *875*, *876*
 conductor, current-carrying, in,
 882–885, *883*, *884*
 Hall effect, *890*, 890–892
 from conductor, current-carrying,
 904–909, *905*
 Ampère's law, 911–915, **912**
 general form (Ampère–Maxwell
 law), 1031–**1032**, 1033–1034,
 1036–1037
 on current loop axis, *908*,
 908–909, *909*
 current loop in
 magnetic force on, *885*,
 885–886, *886*
 motional emf in, *940*, 940–943, *942*,
 944–947, *945*–*947*
 torque on, *885*, 885–889, *886*, *887*
 direction of, *869*, *869*, 874–875, *875*
 (*See also* Biot–Savart law)
 of Earth, *870*, 870–871, *873t*
vs. electric field, 905–906
 energy density of, **976**–**977**,
 1040–1041
 Gauss's law for, 916–919, **918**
 of inductor, energy stored in, 976–978
 Lorentz force and, 880
 magnitude of, 871–874, *873t*, 877–878
 (*See also* Biot–Savart law)
 notation for, 874–875, *875*
 operational definition of, 872
 particle in a magnetic field model,
 869, 871–**874**, *872*, *876*
 right-hand rule for, 911, *911*, 912
 of sinusoidal electromagnetic wave,
1035, 1035–1039, *1036*,
 1041–1042
 of solenoid, *915*, 915–916
 sources of, 1032
 of toroid, *914*, 914–915
 units of, 873
- Magnetic field lines, *869*, 869–870, *870*,
 874–875, *875*
vs. electric field lines, 911, 918, *918*
- Magnetic flux (Φ_B), **917**
 electric field induced by change in,
947, 947–949
 Gauss's law for, 916–919, **918**
- Magnetic force (\vec{F}_B)
 on current-carrying conductor,
 882–885, *883*, *884*
 on current loop, *885*, 885–886
 direction of, *872*, *872*
vs. electric force, 871, *873*
 as field force, 112
 on moving charge, **871**–874, *872*
 right-hand rules for, *872*, *872*
 between parallel conductors, *909*,
 909–911
- Magnetic poles, 868–869
- Magnetic resonance imaging. *See* MRI
 (magnetic resonance imaging)
- Magnetism
 etymology of, 689
 historical awareness of, 689,
 868–869
 in matter, 919–922
- Magnetite, 689, 868
- Magnification
 angular (m), *1118*, **1118**–1119,
 1120, 1121
 by combinations of thin lenses, 1111
 lateral
 lenses, 1106, 1108–1110,
 1111–1112, 1119–1120
 mirrors, **1091**, 1094,
 1098–1099, 1100
 sign conventions, 1096*t*
 magnifying glass (simple magnifier),
1118, 1118–1119
 microscope, compound, *1119*,
 1119–1120
 telescope, *1120*, **1120**–1122, *1121*
 by thin lenses, 1106
- Major axis, of ellipse, **395**
- Makemake, 398
- Malus's law, **1177**
- Manganese (Mn), isotopes, 1396*t*
- Manometer, open-tube, 423, *423*
- Maricourt, Pierre de, 868
- Mars
 escape speed, 405*t*
 orbit of, *406*
 planetary data, 398*t*
- Marsden, Ernest, 1299, 1380
- Mass (m), **4**–**5**, **114**–**115**. *See also* Center
 of mass
 and acceleration, 115–117
 of cables and ropes, *120*
 as form of energy, 1217–1220
 in general theory of relativity,
 1220–1223
 gravitational, **118**
 inertial, **118**, *118*
 invariant, **1218**
 missing, in Universe, 1473–1474
 molar, 578
 origin of, 1468
 in radioactive decay, 1219–1220
 relativistic, 1215
 sample values of, *5t*
 symbol for, 7
 units of, 3, 4–5, 5, **A-1t**, **A-24t**
vs. weight, 115, 117–118, *118*
- Mass defect, **1419**
- Mass density
 linear, 308
 surface, 308
 volumetric, 308
- Mass number (A), **7**, **1381**
- Mass spectrometer, *880*, **880**–881, 1381

- Materials science. *See also* Deformable systems; Friction; Gas(es); Liquid(s); Metal(s); Nonohmic materials; Ohmic materials; Rigid object(s); Solid(s)
- birefringent materials, *1179*, **1179–1180**, *1179t*, *1180*
- liquid crystal displays, *1181*
- neutron activation analysis, **1435–1436**
- nonohmic materials, *812*
- current–potential difference curve, *813–814*, *814*
- ohmic materials, *812*
- current–potential difference curve, *813*, *814*
- resistivity, *813*
- optical activity, **1181**
- Mathematical Principles of Natural Philosophy* (Newton), *389*
- Mathematical representation, *22–23*
- Mathematics review, *A–4–A–21*
- Matrix algebra, *844*
- Matrix mechanics, *1257*
- Matter
- dark, *406–407*
- models of, *6*, *6–7*
- origin of, *1470*, *1470*
- states of, *417*
- transfer of, as energy transfer, *212*, *213*
- Maximum
- central, **1161**, *1161*
- secondary, **1161**, *1161*
- side, **1161**, *1161*
- Maximum angular position, of simple pendulum, *465*
- Maxwell, James Clerk, *640*, *689*, *869*, *1031*, *1031*, *1032*, *1033*, *1034*, *1042*, *1059*, *1195*
- Maxwell–Boltzmann speed distribution function (N_v), **640–641**, *641*
- Maxwell’s equations, **1033–1034**, *1035–1036*, *1196*
- Mean free path, of electron, *818*
- Mean solar day, *5*
- Measurement. *See also* Instrumentation; SI (*Système International*) units; Units
- average expansion coefficient, *575t*
- of force, *112–113*, *113*
- of free-fall acceleration, *465*
- of pressure, *418*, *418*, *423*, *423*
- reference frames and, *96*, *96–98*, *97*
- standards of, *3–6*, *5*
- of temperature, *569–573*
- of time. *See* Clocks
- uncertainty in, *A–20–A–21*
- Mechanical devices
- air conditioners, *656*
- computer keyboard buttons, *780*, *780*
- heat pumps, **656–659**, *657*, *661*, *663*
- refrigerators, **656–659**, *657*
- windshield wipers, intermittent, *850*
- Mechanical energy (E_{mech}), **198**, *216*
- conservation of, *198*, **216–217**, *218*, *221*, *314*
- nonconservative forces and, *227–231*
- in simple harmonic motion, *458–461*, *459*, *460*
- total, in orbits, *403*
- transformation into internal energy, *196*, *196–197*, *216–217*, *222–224*, *227–231*
- Mechanical engineering. *See* Airplanes; Automobiles; Bridges; Railroads; Satellites; Spacecraft
- Mechanical equivalent of heat, *592*, **592–593**
- Mechanical systems, analogies with electrical systems, *980–982*, *981*, *984–985*, *985t*
- Mechanical waves, *483*. *See also* Sinusoidal waves; Sound waves
- beating, *550–552*, **551**, *551*
- components of, *484*
- energy transfer in, *212*, *213*, *484*, *495*, *495–497*
- interference in, **534–538**, *535*, *550–552*, *551*
- linear wave equation, *497–498*
- media, *483*, *484*
- propagation of, *484*, *484–487*, *485*
- reflection of, **494**, *494*, *495*
- speed of, *488*, *491*, *491–494*, *511*
- superposition of, **534–538**, *535*, *536*
- transmission of, **494–495**, *495*
- traveling wave model, *487*, **487–491**
- Mechanics. *See also* Fluid mechanics; Kinematics; Quantum mechanics
- classical, *1*, *2–3*, *1192*
- statistical, *635*, *640*, *667–668*
- Medicine and biophysics. *See also* Eye(s); Hearing
- brain, human, magnetic fields in, *873t*
- cardiac catheterization lab, *904*
- cataracts, UV light and, *1046*
- lasers in, *1328–1329*
- MRI (magnetic resonance imaging), *820*, *873t*, *1407*, **1407–1408**
- positron-emission tomography (PET), *1450–1451*, *1451*
- radiation damage, *1433–1434*, *1434t*
- radiation therapy, *1436*, *1436*
- radioactive tracers, *1434–1435*, *1435*
- x-rays
- and cellular damage, *1409*, *1433*, *1434t*
- medical uses of, *1323*, *1323–1324*
- Meissner effect, *922*, *922*, *1370*, *1370*
- Meitner, Lise, *1419*
- Melting, and entropy, *673*
- Membranes, standing waves in, *550*, *550*
- Mendeleev, Dmitri, *130*
- Mercury (Hg)
- average expansion coefficient, *575t*
- density, *419t*
- emission spectrum, *1298*
- as food contaminant, *1298*
- isotopes, *1397t*
- specific heat, *594t*
- speed of sound in, *512t*
- superconduction in, *819*, *819*
- in thermometers, *570*, *570–571*
- vapor, in “neon” and fluorescent lighting, *1298*
- Mercury (planet)
- escape speed, *405t*
- orbit, *395*, *396*, *406*
- planetary data, *398t*
- Mercury barometer, *423*, *423*
- Mesons, **1451–1452**
- composition, *1462*, *1463*, *1464*, *1464t*, *1466*, *1466*
- properties, *1454t*, **1455**
- patterns in, *1461*, *1461*
- Metal(s)
- alloys, *1355*
- electrical conduction in
- band theory and, *1361*, *1361*
- classical model, *816–818*
- quantum model, *818*, *1355–1359*, *1356*, *1357*
- Fermi energy, *1356*, **1356–1358**, *1357*, *1357t*, *1361*, *1361*
- Hall effect in, *891–892*
- metallic bonds, *1355*, *1355*
- resistivity, *814t*
- superconductors, *819*, *819–820*, *820*, *820t*
- temperature coefficients of resistivity, *814t*, **819**
- thermal conduction in, *609*, *609t*
- work function of, *1243*, *1243t*
- Metal detectors, *970*
- Metal-oxide-semiconductor field-effect transistor (MOSFET), *1368*, **1368–1369**
- Metastable states, *1325–1326*, *1327*
- Meter (m), *3*, *4*
- Meter, electrical, *853*, *853*
- Michelson, Albert A., *1147*, *1196*
- Michelson interferometer, *1147–1149*, *1148*, *1196*, *1196*
- Michelson–Morley experiment, *1196*, *1196–1198*, *1198–1199*
- Microscopes
- compound, *1119*, **1119–1120**
- electron, *1251*, **1251–1252**, *1252*
- optical, limitations of, *1284*
- scanning tunneling (STM), *1283–1284*, *1284*
- Microstate, **668–670**

- Microwave background radiation, *1470*,
1470–1471, *1471*
- Microwaves, **1045**, *1046*
- Millikan, Robert, 692, 764
- Millikan oil-drop experiment, *764*,
764–765
- Minima, **1161**
- Minor axis, of ellipse, **395**
- Mirror(s). *See also* Reflection
concave, *1093*, **1093**–1095, *1094*,
1098–1099
ray diagrams for, *1096*, *1097*
in telescopes, *1121*, *1121*
convex, *1095*, **1095**–1096,
1099–1100, *1100*
ray diagrams for, *1096*–1098, *1097*
diverging, *1095*, **1095**–1096
flat, *1090*–1093, *1091*, *1092*
lateral magnification, **1091**, *1094*,
1098–1099, *1100*
sign conventions, *1096t*
mirror equation, *1094*–1095
multiple images in, *1092*, *1092*
parabolic, *1113*
ray diagrams for, *1096*–1098, *1097*
reversal of image in, *1091*–1092, *1092*
sign conventions for, *1095*–1096,
1096, *1096t*
spherical aberration in, *1093*,
1093, *1113*
- Mirror equation, *1094*–1095
- Missing information, about microstates,
668–671
- Missing mass, in Universe, *1473*–1474
- Models. *See also* Analysis models; Particle
model; Rigid object model;
Wave model
of atom. *See* Atom(s)
of atomic binding forces, *460*, *460*
of electrical conduction
classical, *816*–818
quantum, *818*, *1355*–1359,
1356, *1357*
ideal fluid flow, **427**–428, *428*
ideal gas, **578**–580
of light
early models, *1058*–1059
particle model, *1058*–1059
wave model, *1034*–1035, *1037*,
1059, *1197*
molecular model of ideal gas, *627*,
627–631
of nucleus, *6*, *7*
of Solar System
geocentric model, *394*
heliocentric model, *394*
structural, *627*
utility of, *6*–*7*
- Moderators, **1419**, *1422*, *1423*, *1423*
- Modern physics, *1*, *3*, *1191*
- Molar mass (M), *578*
- Molar specific heat
of complex gases, *635*–637, *636*
at constant pressure (C_p), **632**–634,
635–637
at constant volume (C_v), **632**–634,
635–637, *636*
of hydrogen gas, *1287*–1288
of ideal gas, *631*–634, **632**
molecular rotational and vibrational
components of, *634*, *635*,
635–637, *636*
ratio of (γ), *633t*, *634*
of real gases, *633t*
- Mole (mol), *3*, **578**
- Molecular bonds, *1341*–1344
covalent, *1342*, **1342**–1343, *1354*,
1354–1355
hydrogen, **1343**–1344, *1344*
ionic, **1341**–1342, *1342*,
1352–1354, *1353*
metallic, *1355*, *1355*
in solids, *1352*–1355
van der Waals, *1343*
- Molecular spectra, *1349*–1352,
1350, *1351*
- Molecule(s)
bond length of, *1346*
energy states of, *1344*–1349,
1345, *1348*
and molecular spectra, *1349*–1352,
1350, *1351*
in gas, speed distribution of,
639–643, *641*
kinetic energy of
and pressure, *627*–629
and temperature, *630*–631
nonpolar, **794**
polar, *794*, **794**–795
induced polarization, *795*,
795–797, *796*
quantization of energy in,
636–637, *637*
rms speed (v_{rms}), *630*, *631t*
rotational motion of, *635*, *635*–637,
636, *637*, *1344*–1347, *1345*
symmetric, induced polarization of,
795, *795*
vibrational motion of, *635*,
635–637, *636*, *637*, *1347*,
1347–1349, *1348*
- Molybdenum (Mo), isotopes, *1397t*
- Moment arm (d), **301**, *301*
- Moment of inertia (I), **303**, *342*
as analogous to mass, *303*
axis of rotation and, *303*
calculation of, *307*–311
and conservation of angular
momentum, *345*–346
for diatomic molecule,
1344–1345, *1346*
of rigid object, **303**, *304t*, *307*–311, *467*
- Momentum (\vec{p}). *See* Angular momen-
tum; Linear momentum
- Monochromatic light sources, **1136**
- Moon
distance to, measurement of, *1064*,
1064, *1328*
escape speed, *405t*, *642*
forces causing orbit of, *111*–112
kinetic energy of, *189t*
mass, *5t*
planetary data, *398t*
- Morley, Edward W., *1196*
- Moseley, Henry G. J., *1324*, *1324*
- MOSFET (metal-oxide-semiconductor
field-effect transistor), *1368*,
1368–1369
- Motion. *See also* Collisions; Kinematics;
Laws of motion; Nonuniform
circular motion; Oscillatory
motion; Planetary motion;
Precessional motion; Projectile
motion; Rotational motion;
Simple harmonic motion; Uni-
form circular motion; Waves
in deformable systems, *275*–277
impending, *131*
in one dimension, *21*–47
with resistive forces, *161*–167, **162**
of system of particles, *272*–274
in two dimensions, *78*–98
with constant acceleration, *81*–84
modeling of, *81*, *81*–82, *82*
types of, *21*
- Motional emf, **939**–944, *940*, **941**, *942*,
944–947, *945*–947
- Motion diagrams, *35*, *35*–36
- Motors. *See also* Engines
electric, *950*, **951**–953, *952*
eddy currents in, *954*
power of, *233*
torque generation in, *888*
- Mount Palomar observatory, *1472*
- Mount Wilson observatory, *1471*
- Movie projectors, digital, *1064*,
1064–1065
- MRI (magnetic resonance imaging),
820, *873t*, *1407*, **1407**–1408
- M-theory, **1476**
- Müller, K. Alex, *1371*
- Multiplication
derivative of product of two
functions, *A*–14
distributive law of, **182**
of fractions, *A*–6
of powers, *A*–6
in scientific notation, *A*–4–*A*–5
significant figures in, *12*
and uncertainty, *A*–20
of vector, by scalar, *64*
- Muon lepton number, conservation
of, *1458*

- Muon-neutrino (ν_μ), 1454*t*, 1455, 1458, 1464*t*
- Muons (μ), **1452**
 and length contraction, 1206
 as lepton, 1455
 properties, 1454*t*
 rest energy and charge, 1464*t*
 and time dilation, 1202–1203, 1203
- Music
 and harmonic series, 542–543
vs. noise, characteristics of, 550, 553
- Musical instruments
 characteristic sounds of, 553, 553, 554
 percussion, 542, 550, 550
 pipe organs, 546
 string, 541–544, 548, 551–552, 938, 938
 synthesizers, 554
 temperature and, 548
 tuning of, 543, 552
 wind, 546–549, 547, 553, 553, 554
- Mutual inductance, 978–980, **979**, 979
- Myopia (nearsightedness), **1116**, 1117
- Nanoelectromechanical system (NEMS)
 resonator, 1340
- Nanotechnology, **1280**–1281, 1285, 1364
- Napoleon, cause of death, 1436
- NASA (National Aeronautics and Space Administration), 1471
- National Ignition Facility (Livermore National Laboratory), 1418, 1431
- National Institute of Standards and Technology (NIST), 5, 5, 910
- National Spherical Torus Experiment (NSTX), 1429, 1430
- National Standard Kilogram, 5
- Natural convection, **612**–613
- Natural frequency (ω_0), **468**, 542, 546, 547–548
 of LC circuit, 982, 1013
- Natural logarithms, A–9–A–10
- Natural radioactivity, **1404**–1405, 1404*t*
- Near point, of eye, **1116**
- Nearsightedness (myopia), **1117**, 1117
- Ne’eman, Yuval, 1461
- Negative electric charge, **691**
- NEMS (nanoelectromechanical system)
 resonator, 1340
- Neodymium (Nd), isotopes, 1397*t*
- Neon (Ne)
 electronic configuration, 1319, 1320, 1321
 emission spectrum, 1298, 1298
 isotopes, 1396*t*
- Neon signs, 1296, 1298
- Neptune
 escape speed, 405*t*
 orbit of, 406
 planetary data, 398*t*
- Neptunium (Np)
 isotopes, 1397*t*
 radioactive series, 1404, 1404*t*
- Net force ($\Sigma \vec{F}$), **116**, 314*t*
 momentum and, 252–253
 particle under a net force model, 121, 121, **122**, 123–130
 on system of particles, 272
 time-averaged, 253, 253–254
- Net torque, 301–302, 314*t*
 and angular acceleration, 302–307
- Net work (ΣW), 184, 184–185, 188–190, 314, 314*t*
- Neutral equilibrium, **200**
- Neutral wire, 853, 853
- Neutrinos (ν), **1400**–1401, 1401, 1455
 and missing mass of Universe, 1474
- Neutron(s), 6, 7
 as baryon, 1455
 change to/from proton, 1401, 1466–1467, 1467
 charge of, 692, 695*t*, 1381
 composition of, 1464*t*
 decay of, 1455, 1458
 discovery of, 1383
 field particle absorption and emission, 1453, 1466–1467, 1467
 interactions with nuclei, 1418–1419
 magnetic dipole moment of, 920, 1406
 mass of, 695*t*, 1381, 1382*t*
 properties, 1454*t*
 thermal, **1419**
- Neutron activation analysis, **1435**–1436
- Neutron capture, **1419**
- Neutron number (N), **1381**
vs. atomic number, for stable nuclei, 1385, 1385, 1394–1395, 1395
- Neutron radiation
 damage from, 1433, 1434*t*
 and neutron activation analysis, 1435–1436
- Neutron stars, 347, 405–406
- Newton (N), **116**
- Newton, Isaac, 2–3, 111–112, 112, 249, 388, 389, 392, 1058–1059, 1073, 1221, A–13
- Newtonian mechanics. *See* Mechanics
- Newton · meter (N · m), **180**
- Newton’s law of universal gravitation, **389**–391, 392
- Newton’s laws of motion. *See* Laws of motion
- Newton’s rings, **1145**, 1145
- Nichrome, 814–815, 814*t*, 822
- Nickel (Ni)
 binding energy per nucleon, 1386, 1387
 as ferromagnetic substance, 920
 isotopes, 1397*t*
- Niobium (Nb), isotopes, 1397*t*
- NIST. *See* National Institute of Standards and Technology (NIST)
- Nitrogen (N)
 electronic configuration, 1319
 isotopes, 1396*t*
 decay of, 1400, 1401
 latent heats of fusion and vaporization, 598*t*
 molar specific heat, 633*t*
 molecular speed distribution, 641, 641
- NMR (nuclear magnetic resonance), **1407**, 1407
- Nobel Prize in Physics, 765, 1172, 1236, 1242, 1245, 1246, 1249, 1257, 1299, 1301, 1329, 1354, 1368, 1369, 1370, 1371, 1383, 1390, 1390, 1391, 1400, 1422, 1449, 1449, 1451, 1451, 1452, 1454, 1461, 1464, 1467, 1471
- Noble gases, 1320–1321
 van der Waals bonding in, 1343
- Nodes, 539, **539**–540, 540, 541, 546, 547
 displacement, **546**, 547, 550
 pressure, 546
- Noise pollution, 515
- Nonconservative forces, **198**
 friction as, 196, 196–197, 222–227
 and mechanical energy, 227–231
 work done by, 198, 198
- Noninertial reference frames, **113**
 laws of motion in, 158–161, 159, 160
- Nonisolated system, 253
 angular momentum in, 338–342, 339, **341**
 and conservation of energy, 212, 212–215
 definition of, 212
 problem-solving strategies for, 217–218
- Nonisolated system model
 angular momentum version, 338–342, 339, **341**
 energy version, 212–215, **214**–**215**, 313–314
 momentum version, 252–256, **255**, 273
 problem-solving strategies for, 217–218
- Nonlinear waves, 534
- Nonohmic materials, 812
 current–potential difference curve, 813–814, 814
- Nonpolar molecules, **794**
- Nonsinusoidal waves, 553, 553–554, 554
- Nonuniform circular motion, 156–158, 157
- Nonviscous fluid, 427
- Normal force (\vec{n}), **119**, 119, 121, 121
 and friction, 131
 and work, 180, 180
- Normalization condition, on wave function, 1270

- Normalized wave function, **1270**
for particle in a box, 1273
- Normal modes, **541**
in air columns, 547
in rods and membranes, 550, 550
on strings, 542, 542–543
- Northern Lights, 879
- North pole
of Earth, 870, 870–871
of magnet, 868–869, 870
- Notation
for atomic nuclei, 1381
delta (Δ), 23
for electrical ground, 693
for frames of reference, 96
for nuclear reactions, 1405
on the order of (\sim), 10
for quantities, 7, 8, A–2t–A–3t
sigma (Σ), 43
for unit vector, 66
for vectors, 61
- Novoselov, Konstantin, 1354
- Noyce, Robert, 1369
- NSTX. *See* National Spherical Torus Experiment (NSTX)
- n*-type semiconductors, 1363, **1364**
- Nuclear binding energy, 1386, **1386**–1387
in liquid-drop model, 1387–1389, 1388, 1389
- Nuclear bomb, development of, 1246, 1301, 1452
- Nuclear detectors, 1245
- Nuclear fission, **1419**–1421, 1420
energy released in, 1420–1421
nuclear binding energy and, 1386
- Nuclear force, **1384**–1385, 1385, 1390, 1448
field particles for, 1448, 1449t, 1451–1453, 1453
range of, 1453
source of, 1466–1467, 1467
vs. strong force, 1454, 1464–1465
- Nuclear fusion, 876, **1425**–1432
critical ignition temperature (T_{ignit}), 1428, 1428–1429
energy released in, 1425–1426, 1427–1428
nuclear binding energy and, 1386
in stars, 1425
tunneling and, 1283
- Nuclear magnetic resonance (NMR), **1407**, 1407
- Nuclear magneton (μ_n), **1406**
- Nuclear physics, 1191
- Nuclear reactions, **1405**–1406
- Nuclear reactors
design of, 1423, 1423
fission, 1219–1220, 1421–1425
advantages of, 1425
control of, 1423, 1423–1424
core design, 1423, 1423–1424
history of, 1422, 1422
safety and waste disposal, 1424–1425
- fusion, 1220, 1418, 1426, 1426–1429
advantages and disadvantages of, 1432
design of, 1431–1432, 1432
inertial confinement of plasma, **1431**, 1431
magnetic confinement of plasma, 1429, **1429**–1430
radiation damage in, 1432
- Nuclear spin–orbit effects, 1390
- Nuclear spin quantum number (I), **1406**
- Nucleons, **1381**
binding energy per, 1386, 1386–1387
charge and mass, 1381–1382, 1382t
field particle absorption and emission, 1453
quantization of energy states, 1390, 1390
- Nucleus, atomic, 6, 7
charge and mass, 1381–1382, 1382t
density of, 1383–1384
energy states in external magnetic field, 1407, 1407
magnetic dipole moment of, 920
models
collective model, 1390
history of, 1299
liquid-drop model, **1387**–1389, 1388, 1389
shell model, 1389, **1389**–1390
neutron interactions with, 1418–1419
notation for, 1381
properties of, 1381–1385
radius, 1383, 1389
size and structure, 1382–1384, 1383
spin of, 1406, 1406–1407
stability, 1384–1385, 1385, 1390, 1394–1395, 1395
- Nuclide, **1381**
- Number density ($n_V(E)$), **639**
- Object, isolated, 114
- Object distance, **1090**, 1091
for refracted images, 1101
sign conventions for, 1095–1096, 1096, 1096t, 1101t, 1106t
- Objective, 1119, 1119, 1120, 1120
- Oersted, Hans Christian, 689, 869, 869, 911
- Ohm (Ω), **812**
- Ohm, Georg Simon, 812, 812
- Ohmic materials, 812
current–potential difference curve, 813, 814
resistivity, 813
- Ohm’s law, **812**
and structural model of conduction, 817–818
- Omega (Ω) [particle], 1454t
- Omega laser fusion lab, 1431
- Omega minus (Ω^-), 1454t, 1462, 1462, 1464t, 1465
- Open-circuit voltage, **834**
- Open-tube manometer, 423, 423
- Optical activity, **1181**
- Optical fibers, 1075–**1076**, 1076
- Optical molasses, 1329
- Optical stress analysis, 1179–1180, 1180
- Optical tweezers, 1329
- Optic axis, 1179, 1179
- Optic disk, 1115
- Optic nerve, 1115
- Optics, 1. *See also* Image(s); Image formation; Lens(es); Light; Light waves
history of, 2–3
physical, 1134
ray, 1134
ray approximation in, 1061, 1061
wave, 1134
- Orbit. *See also* Planetary motion
planetary, 394–398, 396
angular momentum in, 396–397
energy analysis models in, 402–403, 404–407
speed of, 406, 406
satellite
changing orbit of, 403–404
energy analysis models in, 403–405
escape speed, **404**–405, 405t
geosynchronous, 399, 399–400, 403–404
- Orbital, **1318**
exclusion principle and, 1318, 1318t
- Orbital angular momentum
and magnetic moment, 919, 919–920
quantization of, 919–920, 1312–1314, 1313
- Orbital magnetic moment (μ), 919–920
- Orbital magnetic quantum number (m_ℓ), **1307**
allowed values, 1307t, 1312–1314, 1313
physical interpretation of, 1312–1314
- Orbital quantum number (ℓ), **1307**
allowed values, 1307t, 1311–1312
physical interpretation of, 1311–1312
- Orcus, 398
- Order number (m), **1138**
- Order-of-magnitude (\sim) calculations, 10–11
- Ordinary (O) ray, **1179**, 1179
- Orion (constellation), color of stars in, 1235, 1235
- Oscillation
damped, in *RLC* circuit, 984–985, 985
eddy current damping and, 953–955, 954, 955
in *LC* circuit, 980, 980–984, 981, 983, 1013

- Oscillation (*continued*)
 overdamped, in *RLC* circuit, 985
 in series *RLC* circuit, 984, 984–985, 985
- Oscillatory motion, 450–471. *See also* Pendulums; Simple harmonic motion
 applications, 459–460
 damped, 468, 468–469, 469
 forced, 469–471, 470
 natural frequency, 468, 542, 546, 547–548
 in object attached to spring, 451, 451–452
 pendulums, 464–468
 resonance, 470, 470–471
- Otto cycle, 665, 665–666, 666
- Ötzi the Iceman (Bronze Age remains), 1380, 1402–1403
- Out of phase, 536, 536
- Overdamped oscillation, 469, 469
 in *RLC* circuit, 985
- Oxygen (O)
 density, 419*t*
 electronic configuration, 1319
 isotopes, 1396*t*
 latent heats of fusion and vaporization, 598*t*
 molar specific heat, 633*t*
 speed of sound in, 512*t*
 thermal conductivity, 609*t*
- Ozone layer, of Earth, 1046
- Pain, threshold of, 514, 515, 516–517, 517
- Pair annihilation, 1450
- Pair production, 1450, 1450
- Palladium (Pd), in radiation therapy, 1436
- Paper, dielectric constant and dielectric strength of, 791*t*
- Parabolas, A-10, A-11
- Parallel-axis theorem, 308–311, 310
- Parallel combination
 of capacitors, 782–783, 783, 785–786
 of resistors, 838, 838–840, 839, 840, 842–843
- Parallel-plate capacitors, 750–751, 751, 778, 778–779
 capacitance of, 779–780, 780
- Paramagnetism, 921, 922
- Paraxial rays, 1093
- Parent nucleus, 1395
- Partial derivatives, 490
- Partial integration, A-17–A-18
- Particle(s), 21
 classification of, 1454–1455, 1454*t*
 conservation laws for, 1455–1459
 constructing from wave, 1252–1255, 1253, 1254, 1475–1476
 detection of, 1469, 1469
 fundamental
 classifications of, 1467
 search for, 1447–1448, 1461, 1464, 1475–1476
 and missing matter of Universe, 1474
 properties, 1454*t*
 rest energy of, 1217–1219
 search for patterns in, 1460–1462, 1461
 source, 392–393
 systems of, motion of, 272–274
 test, 392–393
 total energy of, 1217–1220
 wave properties of, 1249–1252
- Particle accelerators, 881–882, 882
- Particle-in-a-box problem
 classical particles, 1272
 quantum particles, 1272, 1272–1277, 1273, 1274
 analogy to standing waves, 1276
 free electron theory of metals, 1355–1359, 1356, 1357
 Schrödinger equation and, 1278–1279
 three-dimensional boxes, 1356–1357
- Particle in a field model
 electric field, 699, 699–703, 700, 701
 gravitational field, 392–394, 393–394
 magnetic field, 869, 871–874, 872, 876
- Particle in equilibrium model, 120–121, 121, 122–123
- Particle in simple harmonic motion model, 452–458, 456
- Particle in uniform circular motion model, 91, 91–94, 93, 152–156
- Particle model, 21–22, 267, 272
 of light, *vs.* wave model, 1246, 1249
 and principle of complementarity, 1250
 wave properties of particles and, 1249–1252
- Particle physics
 history of, 1451–1453
 questions remaining in, 1474–1475
- Particle under a net force model, 121, 121, 122, 123–130
- Particle under constant acceleration model, 36, 36–40, 38
- Particle under constant speed model, 30–31
- Particle under constant velocity model, 28–31, 29, 30
- Pascal (Pa), 418
- Pascal, Blaise, 420
- Pascal's law, 420–421
- Paschen series, 1299, 1303
- Path difference (δ), 537–538, 1137, 1137–1138
- Path integral, 747
- Path length (r), 536, 537
- Pauli, Wolfgang, 1314, 1315, 1318, 1318, 1400
- Pendulums, 464–468
 as accelerometer, 161
 ballistic, 261–262, 262
 as clock, 465
 conical, 152
 physical, 466, 466–467
 simple, 464, 464–466
 torsional, 467–468, 468
- Penzias, Arno A., 1470, 1470–1471
- Percent uncertainty, A-20
- Perfect differential, A-18
- Perfectly inelastic collisions, 257, 257, 261–262
- Perfect square, A-7
- Perigee, 396
- Perihelion, 396
- Period (T), 92, 93
 of electromagnetic wave, 1038–1039
 of physical pendulum, 467
 of rotating charge in magnetic field, 876
 of simple harmonic motion, 453, 453–454, 456, 462
 of simple pendulum, 465
 of torsional pendulum, 468
 of wave, 487, 487–488
- Periodic motion, 450. *See also* Oscillation; Oscillatory motion; Simple harmonic motion; Waves
- Periodic sound wave, 508
- Periodic table of the elements, 1320, 1320–1322, 1461, A-22*t*–A-23*t*
- Permeability of free space (μ_0), 905
- Permittivity of free space (ϵ_0), 694
- Phase
 change of, in reflection, 1143, 1143
 difference in, in double-slit experiment, 1141
 of simple harmonic motion, 453
- Phase angle, 983, 1000, 1008–1010, 1012
- Phase angle, initial. *See* Phase constant
- Phase change, 593, 597–600, 599
- Phase constant (ϕ), 453, 455, 456, 463, 489
- Phase speed, of wave packet, 1254
- Phasor, 1000, 1000–1001
 addition of, 1008, 1008–1009
- Phasor diagram, 1000, 1000–1001, 1003, 1003, 1005, 1005, 1008, 1008
- Phipps, T. E., 1316
- Phipps–Taylor experiment, 1316, 1317
- Phosphorus (P), isotopes, 1396*t*
- Photinos, 1474
- Photoelectric effect, 1059, 1240, 1240–1246, 1241, 1244
 applications of, 1244–1245, 1245
 classical prediction *vs.* experimental results, 1241–1242

- equation for, 1243
 quantum-mechanical approach, 1242–1244
- Photoelectric photometry, 1245
- Photoelectrons, **1240**
- Photomultiplier tubes, 1245, *1245*
- Photon(s), 1059, **1242**
 absorbed in transition between molecular energy levels, energy of, 1345, 1348, 1349–1350
 angular momentum of, 1322
 antiparticle, lack of, 1449
 energy of, 1059
 as field particle, 1448, 1449*t*, 1452, 1452, 1468, 1468
 history of concept, 1238, 1242
 momentum of, 1246
 and pair production, 1450, 1450
 and photoelectric effect, 1242–1244
 spontaneous emission of, **1325**, 1325
 stimulated absorption of, **1325**, 1325, 1326
 stimulated emission of, **1325**–1327, 1326
 total energy of, **1217**–1218
 virtual, 1452, 1452–1453
 wave model of light and, 1249
- Phototubes, 1244
- Photovoltaic power plants, 1367
- Photovoltaic solar cells. *See* Solar cells
- Physical optics, 1134
- Physical pendulum, 466, **466**–467
- Physics. *See also* Astronomy and astrophysics
 atomic, 1191
 classical, 1, 2–3
 condensed matter, 1191, 1340
 history of, 2–3
 modern, 1, 3, 1191
 nuclear, 1191
 objectives of, 2
 particle, questions remaining in, 1474–1475
 solid-state, 1340
 subdisciplines of, 1
- Pickup coil, 938, 938
- Pictorial representation, 22, 22
- Pi mesons (π). *See* Pions
- Pions (π), **1451**–1453, 1453, 1455
 neutral, lack of antiparticle, 1449
 pion-exchange model, 1453, 1453, 1466–1467, 1467
 properties, 1454*t*
- Pipelines, and thermal expansion, 568
- Pitch, 553
- Planck, Max, 1059, 1191, 1233, 1236, 1236–1238, 1242
- Planck length, **1474**–1475
- Planck satellite, 1471
- Planck's constant (h), 1059, **1236**, **1238**, 1243
- Planck's wavelength distribution function, 1237
- Plane of polarization, 1176
- Plane polar coordinates (r, θ). *See* Polar coordinate system
- Plane-polarized light, 1176. *See also* Polarization
- Planet(s). *See also specific planets*
 atmosphere, escape speeds and, 405
 data on, 398*t*
 escape speed from, **404**–405, 405*t*
 orbital speed of, 406, 406
- Planetary motion, 394–398, 396. *See also* Kepler's laws; Orbit
 angular momentum in, 396–397
 energy analysis models in, 402–403, 404–407
 orbital speed, 406, 406
- Plane waves, electromagnetic, *1035*, **1035**–1039, 1036
 Poynting vector of, 1039–1040
 wave intensity of, 1040, 1041
- Plano-concave lens, 1105, *1106*
- Plano-convex lens, 1105, *1106*, 1145, 1145
- Plasma, 879, 1426
 inertial confinement of, **1431**, 1431
 magnetic confinement of, 1429, **1429**–1431
 quark-gluon, **1465**
- Plasma balls, 725
- Plastic, birefringent qualities, 1179–1180, 1180
- Plastic scintillators, 1381
- Plates, of capacitor, 777
- Platinum (Pt)
 resistivity, 814*t*
 work function of, 1243*t*
- Pushenko, Evgeni, 346
- Plutinos, 398
- Pluto
 as dwarf planet, 398*t*
 as Kuiper belt object, 398
 planetary data, 398*t*
 telescope imaging of, 1169, 1169
- Plutonium (Pu), isotopes, 1397*t*
- p - n junction, **1365**, 1365, 1366, 1368, 1368
- Point charge(s), **694**
 electric field of, 709, 709, 752, 755, 756
 electric potential due to, 752, 752–754
 flux due to, 728, 728–730, 729
 force between, 694–699
 motion in uniform electric field, 710–713
 particle in a magnetic field model, 869, 871–**874**, 872, 876
 particle in an electric field model, 699–703, **701**
- Point source, of sound waves, 513, 513, 514–515
- Poisson, Simeon, 1161
- Polar coordinate system (r, θ), 59–60, 60, 294
 conversion to/from Cartesian coordinates, 60–61
- Polarization
 of dielectrics, 795–797, 796
 induced, 795, 795–797, 796
 of light waves, 1175–1181
 direction of polarization, 1175
 by double refraction, 1179, 1179–1180, 1180*t*
 Malus's law, **1177**
 plane of polarization, 1176
 polarizing angle, **1177**–1178, 1178
 by reflection, 1177–1178, 1178
 by scattering, 1180, **1180**–1181
 by selective absorption, 1176, 1176–1177
 sunlight, 1180, 1180–1181
 and optical activity, 1181
 of water molecule, 794, 794–795
- Polarizer, 1176–1177, 1177
- Polarizing angle (θ_p), **1177**–1178, 1178
- Polar molecules, 794, **794**–795
 induced polarization, 795–797, 796
- Polaroid, 1176
- Pole-in-the-barn paradox, 1208–1209, 1209
- Polonium (Po)
 decay of, 1220
 discovery of, 1391
 isotopes, 1397*t*
- Population inversion, **1326**–1327
- Position (x), 22, **22**–23
 angular (θ), **294**, 294, 296–297, 296*t*
 of particle under constant acceleration, 36, 37, 38, 44–45
 of particle under constant velocity, 29
 in simple harmonic motion, 452–453, 453, 454, 455, 455
- Position–time graph, 22, 22
 for particle under constant velocity, 29, 29
 relation to acceleration–time graph, 33, 33
 relation to velocity–time graph, 33, 33
 slope of line between two points on, 24
 slope of line tangent to, 25–26, 26, 27, 33, 33
- Position vector (\vec{r}), **67**, **78**–79, 79, 81
 as function of time, 81–82, 82, 83–84
 of projectile, 84, 85
- Positive electric charge, **691**
- Positron-emission tomography (PET), 1450–1451, 1451
- Positrons (e^+), **1391**, 1449, 1449–1451, 1450

- Potassium (K)
 electronic configuration, 1321
 Fermi energy, 1357*t*
 isotopes, 1396*t*, 1404
- Potential. *See* Electric potential
- Potential difference (ΔV), 747–748
 across capacitor plates, 777–778
 applications of, 765–766
 mechanical analogy to, 985*t*
 in uniform electric field, 748–752,
 749, 750
 units of, 748
 value of electric field from, 755,
 755–756
- Potential energy, 191–196, **192**, 192. *See*
also Electric potential; Electric
 potential energy
 conservative forces and, 197, 198–199
 of crystal, 1353, 1353
 elastic (U_s), **194**–196, 195
 energy diagrams and, 199–200, 200
 equilibrium and, 200, 200–201
 gravitational (U_g), **192**–194, 400,
 400–402, 401
 Lennard–Jones function, 201, 201
 of magnetic dipole in magnetic field,
 887–888
 in mechanical waves, 496
 reference configuration for, 193, 199
 in simple harmonic motion, 458–459,
 459, 460
- Potential energy function (U), **198**–199
 for diatomic molecule, 1347, 1347
 for system of two atoms, 1341,
 1341–1342, 1342
- Potential wells, 1278
- Pound (lb), **116**
- Power (P), **232**–233, 314*t*
 average, **232**
 electrical. *See* Electrical power
 of engine, 656
 instantaneous, **232**, 313
 of lens, **1117**
 of motor, 233
 in rotational motion, 313, 314*t*
 of sound waves, 512–513
 of wave, 496
- Power cords, three-pronged, 854, 854
- Power factor ($\cos \phi$), **1011**
- Power lines, power transmission
 through, 822, 1015, 1017,
 1017–1018
 corona discharge in, 763–764,
 766, 766
 as energy transfer, 212, 213
 and I^2R loss, 822, 822
- Power plants, commercial, 949, 998, 999,
 1367. *See also* Nuclear reactors
- Powers, A–6–A–7
 and uncertainty, A–20–A–21
- Powers of ten, prefixes for, 5, 6*t*
- Power stroke, 665, 666
- Poynting vector (\vec{S}), **1039**–1040, 1041,
 1042, 1044, 1044
- Praseodymium (Pr), isotopes, 1397*t*
- Precessional frequency (ω_p), 351–**352**
- Precessional motion, **350**–352, 351
- Prefixes, for powers of ten, 5, 6*t*
- Presbyopia, **1117**
- Pressure (P), **375**, 417, 417–419, **418**
 absolute (P), **423**
 atmospheric (P_0), 419, 420
 barometric, 423
 Bernoulli's equation, 430–433, **431**
 depth and, 419–423, 420
 elevation and, 430–431
 force and, 418
 gauge, **423**
 measurement of, 418, 418, 423, 423
 molecular kinetic energy and,
 627–629
 Pascal's law, **420**–421
 PV diagrams, **602**, 602
 sound waves as variations in, 508,
 508–510, 509
vs. temperature and volume, in ideal
 gas, 578–579
 units of, A–2*t*
- Pressure amplitude (ΔP_{\max}), **509**–510,
 510, 512, 514
- Pressure antinodes, **546**
- Pressure nodes, **546**
- Pressurized-water reactor, 1423, 1423
- Prestressed concrete, 375, 375–376
- Primary winding, 1015, 1015
- Princeton Plasma Physics Laboratory,
 1429, 1430
- Principal axis, of mirror, **1093**, 1093, 1094
- Principal quantum number (n), **1307**,
 1307*t*, 1308
- Principle of complementarity, **1250**
- Principle of equivalence, **1222**
- Principle of Galilean relativity, 1193,
1193–1196, 1194
- Principle of relativity, **1198**–1199
- Prism
 dispersion in, 1073, 1073
 refraction in, 1070, 1070
- Probabilistic interpretation of quantum
 mechanics, 1268–1271
- Probability
 and Gauss's probability integral, A–19*t*
 and indeterminacy of future, 1283
 of microstates, 668–671
- Probability amplitude. *See* Wave function
- Probability density ($|\psi|^2$), **1269**, 1269,
 1273, 1273, 1279
 of hydrogen electron, 1308–1309, 1309
- Problem-solving strategies. *See also*
 Analysis models
 alternative representations, 22, 22–23
 for collisions in one dimension, 259
 for collisions in two dimensions, 265
 dimensional analysis, 8–9
 for electric field calculation, 705
 for electric potential, 757
 estimation, 10–11
 force diagram, **119**, 119
 free-body diagram, **119**, 119
 for Gauss's law problems, 731
 general, 45–47
 interference in thin films, 1146
 for isolated system model, 217–218
 for Kirchhoff's rules, 844–845
 model-building, 6–7
 Newton's laws, application of,
 121–122
 for nonisolated system model,
 217–218
 projectile motion, 87
 reasonableness of values, checking, 4
 for rigid object in equilibrium,
 366–367
 units, inclusion of, 9
- Processes
 irreversible, 653–654, **659**–660
 entropy in, 662–668
 reversible, **659**–660
 entropy in, 662–668
- Projectile motion, **84**–91, 85
 acceleration in, 84–85, 88–89
 conservation of mechanical energy
 in, 221
 exploded projectile, 273–275, 274
 height, maximum, 85, 85–87
 horizontal range, 85, 85–87, 90–91
 problem-solving strategies, 87
 trajectory, 84, 85, 86, 86
- Projectors, digital, 1064, 1064–1065
- Promethium (Pm), isotopes, 1397*t*
- Propagation
 of electromagnetic waves, 1035
 of mechanical waves, 484,
 484–487, 485
 of uncertainty, A–20–A–21
- Proper length (L_p), **1205**
- Proper time interval (Δt_p), **1202**, 1206
- Proton(s), 6, 7
 as baryon, 1455
 change to/from neutron, 1401,
 1466–1467, 1467
 charge, 691, 692, 694, 695*t*
 composition, 1464*t*
 decay, detection of, 1457, 1457
 field particle absorption and emis-
 sion, 1453, 1466–1467, 1467
 magnetic dipole moment of,
 920, 1406
 mass, 695*t*, 1381, 1382*t*
 neutron change into, 1401
 properties, 1454*t*
 stability, 1456–1457
 total energy, 1218–1219

- Proton-proton cycle, **1425**–1426
 Proton radiation, damage from, 1434
 Ptolemy, Claudius, 394
p-type semiconductors, **1364**, 1364
 Pulse, 484, 484, 485, 485, 486, 486–487
 Pupil, 1115, 1115–1116
 Pure rolling motion, 316–**317**
 PV diagram, **602**, 602, 604
 P waves, **485**
 Pyrex glass, speed of sound in, 512*t*
 Pythagorean theorem, A–11
- QUaD project, 1471
 Quadratic equations, A–7
 Quality (timbre), 553
 Quality factor (*Q*), **1014**
 Quantities
 derived, 5–6, A–24*t*
 fundamental, 5
 notation for, 7, 8, A–2*t*–A–3*t*
 Quantity of motion, 249
 Quantization
 of atomic orbital angular momentum,
 919–920, 1312–1314, 1313
 of electric charge, **692**, 764–765
 of energy levels, 636–637, 637,
 1236–1237, 1237, 1273,
 1273–1274, 1274
 in Bohr model, 1300–1305, 1302,
 1303, 1311
 in quantum model, 1306–1308
 of energy of particle in a box,
 1272–1275, 1273, 1274
 of frequency, 533, **541**, 542, 547,
 548, 1276
 of light, 1059
 of molecular rotational motion,
 1344–1346, 1345
 of molecular vibrational motion,
 1347–1349, 1348
 of nuclear spin, 1406, 1406–1407
 of nucleon energy states, 1390, 1390
 space, **1312**–1317, 1313, 1314–1317,
 1315, 1317
 Quantum chromodynamics (QCD),
 1466–1467, 1468
 Quantum dot, **1280**–1281
 Quantum electrodynamics theory, 1452
 Quantum mechanics. *See*
 also Quantization
 on blackbody radiation, 1236–1238
 Compton effect, 1246, **1246**–1248, 1247
 correspondence principle, **1304**
 Einstein and, 1198, 1233, 1234,
 1238, 1283
 free-electron theory of metals,
 1355–1359, 1356, 1357
 history of, 3, 1233–1234, 1236,
 1236–1238, 1246, 1278, 1301
 impact of, 1191
 and indeterminacy of future, 1283
 model of atom, 1306–1308
 model of electrical conduction, 818
 and molar specific heat, 636–637
 orbital angular momentum in,
 919–920, 1312–1314, 1313
 particle and wave models of light,
 1246, 1249
 photoelectric effect, 1240, 1240–1246,
 1241, 1244
 as physics subdiscipline, 1, 3
 probabilistic interpretation of,
 1268–1271
 and simple harmonic motion,
 1239–1240, 1286–1288, 1287
 spin angular momentum in, 920
 strangeness of, 1234
 wave properties of particles, 1249–1252
 Quantum number(s), **1236**
 bottomness, 1464
 charm (*C*), 1463
 color charge as, 1465–1466
 exclusion principle and,
 1318–1319, 1319
 of hydrogen atom, 1306–1308, 1307*t*
 for $n = 2$ state, 1317, 1317*t*
 physical interpretation of, 1311–1317
 nuclear spin (*I*), **1406**
 orbital (ℓ), **1307**
 allowed values, 1307*t*, 1311–1312
 physical interpretation of,
 1311–1312
 orbital magnetic (m_ℓ), **1307**
 allowed values, 1307*t*,
 1312–1314, 1313
 physical interpretation of,
 1312–1314
 physical interpretation of, 1311–1317
 principal (*n*), **1307**, 1307*t*
 rotational (*J*), **1345**
 spin magnetic (m_s), **1314**, **1316**
 physical interpretation of,
 1314–1317, 1315
 topness, 1464
 vibrational (*v*), **1347**
 Quantum number space, 1358,
 1358–1359
 Quantum particles, **1252**–1255
 under boundary conditions,
 1271–1277, 1272, 1273, 1274
 analogy to standing waves, 1276
 analysis model for, 1276–**1277**
 free electron theory of metals,
 1355–1359, 1356, 1357
 Schrödinger equation and,
 1278–1279, 1280, 1281
 well of finite height, 1279,
 1279–1281, 1280
 well of infinite height, 1271–1277,
 1272, 1273, 1274
 electron double-slit experiment, 1255,
 1255–1256, 1256
 expectation value of, **1270**, 1271,
 1275–1276
 Heisenberg uncertainty principle and,
 1256–1258
 probability density of, **1269**, 1269
 quantization of energy, 1272–1275,
 1273, 1274
 tunneling by, 1281, **1281**–1282,
 1399, 1399
 applications, 1267, 1282–1286
 wave equation for (Schrödinger equa-
 tion), 1269, **1277**–1279
 wave properties of, 1249–1252
 Quantum particle under boundary
 conditions analysis model,
 1277–**1278**
 Quantum states, **1236**
 allowed, 1318–1320, 1318*t*, 1319,
 1322, 1322
 Quantum statistics, 1356
 Quaoar, 398
 Quark-gluon plasma, **1465**
 Quarks, 6, 7, 1462, **1462**–1465, 1464*t*
 in baryons, 1464*t*
 color charge, **1465**–1467, 1466
 flavors, **1462**, 1463
 interaction of (quantum chromody-
 namics), 1466–1467
 in mesons, 1464*t*
 original model, 1462–1463
 properties, 1463*t*
 in Standard Model, 1467–1468, 1468
 Quartz, resistivity of, 814*t*
 Quasi-static compression/expansion,
 601–602, 606
 Qubic project, 1471
Q value. *See* Disintegration energy (*Q*)
- Rad (radiation absorbed dose), **1433**,
 1434, 1434*t*
 Radar, police, 520
 Radial acceleration (a_r), 94, **94**–96,
 156–158, 157
 Radial probability density function,
 1309, 1309–1311, 1311
 Radian (rad), **294**
 converting degrees to/from, 294
 Radian measure, A–10, **A–10**
 Radiation, particle
 background, 1434
 damage from, 1432–1434, 1434*t*
 discovery of, 1380
 dose limit recommendations, 1434
 fatal doses, 1434
 as term, 1391
 units for, 1433–1434, 1434*t*
 uses of, 1434–1437, 1435–1437
 Radiation, thermal, **613**–614
 Radiation pressure, of electromagnetic
 waves, 1042–1044
 Radiation therapy, 1436, 1436

- Radio
 filter circuits in, 1019
 receiving circuit in, 1014
- Radioactive decay
 alpha (α) decay, 1391, 1391*t*, 1395, 1395–1399, 1399
 decay pathways, 1404*t*
 as example of tunneling, 1282–1283, 1283, 1399
 and radiation damage, 1433, 1433*t*
 beta (β) decay, 1391, 1391*t*, 1394, 1395, 1399–1402, 1400, 1401
 and carbon dating, 1402–1403
 and cellular damage, 1434*t*
 decay pathways, 1404*t*
 and neutron activation analysis, 1438
 early research on, 1390–1391
 gamma (γ) decay, 1391, 1391*t*, 1403–1404, 1404
 decay pathways, 1404*t*
 and food preservation, 1436–1437, 1437
 and radiation damage, 1433, 1434*t*
 and radiation therapy, 1436
 mass change in, 1219–1220
 radioactive series, 1404, 1404–1405, 1404*t*
 rate of, 1392, 1392–1394
 types of, 1391
- Radioactive material, disposal of, 1424
- Radioactive tracers, 1434–1435, 1435
- Radioactivity, 1390–1394
 artificial, 1404, 1404*t*
 natural, 1404–1405, 1404*t*
- Radio telescopes, 1168
- Radio waves, 1045, 1046
- Radium (Ra)
 decay of, 1395, 1395, 1398, 1399, 1404, 1404–1405
 discovery of, 1391
 isotopes, 1397*t*
- Radon (Rn)
 electronic configuration, 1320, 1321
 isotopes, 1397*t*
- Railroads
 electromagnetic braking systems, 954
 forces between cars, 123–124
 locomotive engine, 654, 654
 thermal expansion of track, 576
- Rainbow(s), 107, 1058, 1073, 1074
- Rainbow hologram, 1174
- Range, horizontal (R), of projectile, 85, 85–87, 90–91
- Rarefactions, 509
- Rated voltage of capacitor, 791
- Ray(s), 513, 513, 1035
 extraordinary (E), 1179, 1179
 ordinary (O), 1179, 1179
- Ray approximation, 1061, 1061, 1090
- Ray diagrams
 for mirrors, 1096–1098, 1097
 for thin lenses, 1106, 1106–1110
- Rayleigh–Jeans law, 1235–1236, 1236, 1237, 1238
- Rayleigh’s criterion, 1166
- Ray optics, 1134
- Ray (geometric) optics, 1061
 ray approximation in, 1061, 1061
- RBE (relative biological effectiveness), 1433, 1434*t*
- RC circuits
 alternating current, 1019, 1019
 direct current, 846–852
- RC high-pass filter, 1019, 1019
- RC low-pass filter, 1019, 1020
- Reaction energy (Q), 1405
- Reaction forces, 119, 119
- Real image, 1091
- Rectangular components. *See* Components, of vector
- Rectangular coordinate system. *See* Cartesian coordinate system
- Rectangular hyperbola, A–11, A–11
- Rectification, 1018, 1018–1019
- Rectifier(s), 1018, 1018–1019
- Red shift
 of astronomical objects, 1210
 of light in gravitational field, 1222
- Reduced mass, of diatomic molecule, 1345, 1346
- Reference circle, 462–463, 463
- Reference configuration, for potential energy, 193, 199
- Reference frames
 inertial, 113–114
 noninertial, 113
 laws of motion in, 158–161, 159, 160
 and principle of Galilean relativity, 1193, 1193–1196, 1194
 and relative velocity, 96, 96–98, 97
 notation for, 96
- Reference intensity (I_0), 515
- Reflecting telescope, 1121, 1121–1122
- Reflection, 1061–1065, 1062, 1063. *See also* Mirror(s)
 change of phase in, 1143, 1143
 diffuse, 1062, 1062
 law of reflection, 1062, 1071, 1071–1072
 applications, 1063–1065, 1064, 1065
 polarization of light by, 1177–1178, 1178
 and radiation pressure, 1042
 retroreflection, 1063–1064, 1064
 sign conventions for, 1095–1096, 1096, 1096*t*
 specular, 1062, 1062
 total internal, 1074–1076, 1074–1076
 applications, 1075–1076, 1076
- of waves, 494, 494, 495
 wave under reflection analysis model, 1061–1065, 1062, 1063
- Reflection coefficient (R), 1281
- Reflection grating, 1169
- Reflections on the Motive Power of Heat* (Carnot), 661
- Refracted ray, 1065
- Refracting telescope, 1120, 1120–1121, 1122
- Refraction. *See also* Index of refraction; Lens(es)
 and dispersion, 1072–1074, 1072–1074
 double, polarization by, 1179, 1179–1180, 1180, 1180*t*
 in eye, 1115
 by flat surface, 1102, 1102
 image formation by, 1100, 1100–1104, 1101, 1101*t*, 1102, 1107, 1107
 law of, 1068
 Snell’s law of, 1067–1069, 1068, 1072, 1072, 1074
 wave under refraction analysis model, 1065, 1065–1071, 1066, 1067, 1068
- Refrigerators, 656–659, 657
- Reines, Frederick, 1400
- Relative acceleration, 97
- Relative velocity, 96, 96–98, 97
- Relativistic Doppler effect, 1209–1210
- Relativistic Heavy Ion Collider (RHIC), 1465, 1468, 1469
- Relativity, Galilean, 1193, 1193–1196, 1194
 limitations of, 1195–1196
- Relativity, general, 1220–1223, 1221, 1222, 1222
 on gravitational waves, 1149
 history of theory, 1198
- Relativity, special, 1
 conservation of energy and, 1219–1220
 energy–momentum relationship, 1217–1219
 history of theory, 2, 3, 1192–1193, 1197, 1198, 1198
 length contraction, 1205–1206, 1206, 1207–1209, 1209
 limitations of, 1233
 Lorentz space–time transformation equations, 1210–1212
 Lorentz velocity transformation equations, 1212–1214, 1213
 mass and, 1215, 1219–1220
 Maxwell’s equations and, 1033, 1196
 Michelson–Morley experiment, 1196, 1196–1198
 observer agreements and disagreements, 1213
 pole-in-the-barn paradox, 1208–1209, 1209

- principle of relativity, **1198**–1199
- relativistic Doppler effect, 1209–1210
- relativistic energy, 1216–1220, *1217*
- relativistic force (\vec{F}), 1215
- relativistic kinetic energy, 1216–1220, *1217*
- relativistic linear momentum, 1214–1216, 1217–1218, 1219
- space–time graphs, *1207*, 1207–1209, *1209*
- and speed of light, 1195–1198, *1196*, 1198–1199
- and time
- dilation of, *1200*, 1200–1204, **1201**, 1206, 1209, 1211–1212
 - proper time interval, **1202**, 1206
 - relativity of, *1199*, 1199–1200
 - twin paradox, 1204–1205, *1205*, 1207, *1207*
- rem (radiation equivalent in man), **1434**–1435, *1434t*
- Reproduction constant (K), 1422, 1423–1424
- Residual strong force, 1454
- Resistance (R), 811–816, **812**
- and electrical power transmission, 822, *822*
 - equivalent (R_{eq}), **836**–837, *837*, **838**–839, 841–842
 - internal, *834*, **834**–835
 - mechanical analogy to, 984–985, *985t*
 - temperature and, 817–819, *819*
- Resistive forces, 161–167, **162**.
- See also* Friction
 - direction of, 162
 - proportional to object speed squared, 164–167
 - proportional to object velocity, *162*, 162–164
- Resistivity (ρ), **813**, 814*t*, 817–818
- Resistor(s), **812**–813, *813*. *See also* RC circuits; RLC circuits; RL circuits
- in AC circuit, *999*, 999–1002, *1000*, *1001*, 1012
 - circuit symbol for, 820
 - color coding of, 813, *813*, 813*t*
 - composition, 812
 - energy delivered to, 820–821, 851–852, 1001
 - energy stored in, 976
 - in parallel combination, *838*, **838**–840, *839*, *840*, 842–843
 - power delivered to, 821–823, 834–836, 842–843, 852, 1001, 1012
 - in series combination, **836**–837, *837*, 839
 - wire-wound, 812
- Resolution
- circular aperture, 1166–1169, *1167*, *1169*
 - single-slit aperture, 1166, *1166*
- Resonance, *470*, **470**–471, **546**, *546*, 548
- in LC circuits, 980–981
 - in series RLC circuits, 1013–1015, *1014*
- Resonance frequency (ω_0), **470**, *470*, **546**, 548
- of series RLC circuit, **1013**–1015, *1014*
- Resonant tunneling devices, **1284**–1285, *1285*
- Resonant tunneling transistors, *1285*, **1285**–1286
- Rest energy, **1217**–1219
- Rest-energy equivalent of atomic mass unit, 1382
- Restoring force, 186, **451**
- Resultant force. *See* Net force
- Resultant vector, **62**
- Retina, *1115*, 1116
- Retroreflection, 1063–1064, *1064*
- Reverse bias, 1366, *1366*
- Reversible processes, **659**–660
- Carnot cycle as, 661, 662, 663
 - entropy and, 662–668
- Richter, Burton, 1464
- Rigel (star), color of, 1235, *1235*
- Right-hand rule
- for Ampère’s law, 912
 - for angular momentum, 339
 - for angular velocity vector, 295–296, *296*
 - for force on charge in magnetic field, 872, 872–873
 - for magnetic field direction, 911, *911*, 912
 - for torque on current loop in magnetic field, 887, *887*
 - for vector products, 336, *336*
- Right triangle, A–11
- Rigid object(s), **293**
- angular momentum of, *342*, 342–345
 - in equilibrium, 364–365, 366–372
 - problem-solving strategies for, 366–367
 - gravitational force on, *365*, 365–366
 - moment of inertia of, **303**, 304*t*, 307–311, 467
 - as physical pendulum, *466*, 466–467
 - rolling motion in, 316–321, *317*
 - rotational motion in. *See* Rotational motion
 - torque on. *See* Torque
- Rigid object in equilibrium model, 363–365, **364**
- Rigid object model, **293**
- Rigid object under constant angular acceleration model, 296–298, **297**
- Rigid object under a net torque model, 302–307, **304**–**305**
- Ripple, 1019
- RLC circuits, series
- alternating current, *1007*, 1007–1011, *1008*
 - average power in, **1011**–1014, *1014*
 - resonance in, 1013–1015, *1014*
 - direct current, oscillation in, 984–986, *985*, *986*, *986t*
- RL circuits, direct current, 972–976, **973**, *973*, *974*, *975*
- rms current, **1001**–1002, 1003, 1004
- rms speed (v_{rms}), 630, 631*t*
- rms voltage, 1001
- Rockets
- escape speed of, 404–405, 405*t*
 - exploded, motion of, 274–275
 - kinetic energy of, 189*t*
 - propulsion, 249, 277, 277–278, 279
 - thrust, **278**
- Rods (in eye), **1116**
- Rods, standing waves in, 550, *550*
- Roemer, Ole, 1060, *1060*
- Roentgen (R), **1433**
- Roentgen, Wilhelm, 1174
- Rolling friction, 318
- Rolling motion, 316–321, *317*
- pure, 316–**317**
- Root-mean-square (rms) speed (v_{rms}). *See* rms speed (v_{rms})
- Roots, A–6
- Rotating bar, motional emf in, *943*, 943–944
- Rotational angular momentum, allowed values of, for diatomic molecule, 1345, *1345*
- Rotational equilibrium, torque and, **364**–365
- Rotational kinetic energy (K_R), *311*, **311**–312, 314, 314*t*
- Rotational motion, 21, 293–321. *See also* Torque
- angular and translational quantities, relationships between, 298–300
 - angular momentum approaches to, 338–350
 - axis of rotation in, 295, 339
 - energy approaches to, 312–316, 318–321
 - equations for, 314*t*
 - kinematic equations, 296–297, *296t*, *297*
 - kinetic energy (K_R) of, *311*, **311**–312, 314, 314*t*
 - of molecules, *635*, 635–637, *636*, *637*, 1344–1347, *1345*
 - moment of inertia (I) and, **303**, 304*t*, 307–311
 - momentum approaches to, 314, 320–321
 - quantities and terminology in, 293–296
 - reference line for, *294*, *294*

- Rotational motion (*continued*)
 rigid object under constant angular acceleration model, 296–298, **297**
 rolling, 316–321, *317*
 second law of motion for, 302–303, 339, 340–341, **342–343**
 work–kinetic energy theorem for, 189, **313–314**
- Rotational quantum number (J), **1345**
- Rotation rate, 92
- Rounding, 13
- Rubber
 dielectric constant and dielectric strength of, *791t*
 resistivity, *814t*
 speed of sound in, *512t*
 thermal conductivity, *609t*
- Rubbia, Carlo, 1454
- Rubidium (Rb), isotopes, 1321, *1397t*
- Rubisco, *1174*
- Ruthenium (Ru), isotopes, *1397t*
- Rutherford, Ernest, 1299–1300, 1380, 1382–1383, 1405
- R -value, **611–612**, *611t*
- Rydberg, Johannes, 1298, 1303
- Rydberg atoms, 1305
- Rydberg constant (R_H), **1298**
- Safety, electrical, household wiring and, 853–855, *854*
- Salam, Abdus, 1467
- Sandage, Allan R., 1472
- Satellite-dish antenna, *1094*
- Satellites, orbit of
 changing orbit of, 403–404
 energy analysis models in, 403–405
 escape speed, **404–405**, *405t*
 geosynchronous, *399*, 399–400, 403–404
- Saturation, of nuclear forces, 1387
- Saturn
 escape speed, *405t*
 orbit of, *406*
 planetary data, *398t*
- Savart, Félix, 904
- s bands, *1360*, 1360–1361
- Scalar (dot) product, *181*, **181–183**
- Scalar quantity, **23**, **61**
 multiplication of vector by, 64
- Scanning tunneling microscope (STM), 1283–1284, *1284*
- Scattering event, **1405**
 polarization by, *1180*, **1180–1181**
- Schmitt, Harrison, *118*
- Schrieffer, J. R., 1370
- Schrödinger, Erwin, 1233, 1267, 1269, 1277, *1278*, 1283
- Schrödinger equation, 1269, **1277–1279**, 1280, 1281
 and quantum model of hydrogen atom, 1306–1308
- Schwarzschild radius (R_S), **406**, *406*
- Schwinger, Julian, *1452*
- Scientific notation, **A–4–A–5**
 significant figures in, 12
- Sclera, *1115*
- Scotopic vision, *1115*
- Scott, David, 41
- Secant (sec), **A–11**, **A–12t**
- Second (s), **3**, **5**
- Secondary maxima, **1161**, *1161*
- Secondary winding, 1015, *1015*
- Second derivative, **A–14**
- Second law, Kepler's, *396*, 396–397
- Second law of motion, Newton's, **115–117**
 analysis models using, 120–130
 in nonuniform circular motion, 158
 for particle, 249
 relativistic form of, 1215
 rotational form of, 302–303, 339, 340–341, **342–343**
 for system of particles, 272
 in uniform circular motion, 151–156
- Second law of thermodynamics, 653–654, 676–678
 Clausius statement of, **657**, 676
 entropy statement of, 676
 equivalence of statements of, 676–677
 Kelvin–Planck form of, **655**, 657, 660, 677
- Sedna, 398
- Seeds (radiation therapy devices), 1436
- Segré, Emilio, 1449
- Seismographs, 485
- Selection rules, for allowed atomic transitions, **1323**
- Selectrons, 1476
- Self-induced emf (\mathcal{E}_L), **970–971**, 972
- Self-induction, 970–**971**, 972
- Self-sustained chain reaction, 1422, *1422*
- Semiconductor devices, 1364–1370
- Semiconductor lasers, 1366
- Semiconductors, *136*, **692**, 819, 1361*t*, 1362, *1362*, 1367
 doped, *1363*, **1363–1364**, *1364*
 extrinsic, **1364**
 and Hall effect, 891, 892
 intrinsic, **1362**, *1363*
 n -type, *1363*, **1364**
 p -type, **1364**, *1364*
- Semiempirical binding-energy formula, *1388*, **1388–1389**
- Semimajor axis, of ellipse, **395**, *395*
- Semiminor axis, of ellipse, **395**, *395*
- Series combination
 of capacitors, *784*, **784–786**
 of resistors, **836–837**, *837*, 839
- Series expansions, **A–13**
- Series limit, **1298**
- Series RLC circuits. *See* RLC circuits, series
- Sewing machine, treadle drive system, 462, *462*
- Shear modulus (S), **373**, **374**, *374t*
- Shear strain, **374**
- Shear strength, 375–376
- Shear stress, **374**, *374*
- Shell model of nucleus, *1389*, **1389–1390**
- Shells, atomic, **1307**, *1307t*
 filling of, 1318–1320, 1318*t*, *1319*
- Shock, electric, 853–854
- Shockley, William, 1368
- Shock waves, 522, *522*
- Short-circuit condition, 853
- Shutter, of camera, *1113*, 1113–1114
- Side maxima, **1161**, *1161*
- Sievert (Sv), 1434, *1434t*
- Sigma (Σ) [particle], 1454*t*, 1459, 1464*t*
- Sigma (Σ) [symbol], 43
- Significant figures, **11–13**
- Silicon (Si)
 crystals, 1354, *1354*
 energy-gap value, 1361*t*
 isotopes, 1396*t*
 resistivity, 814*t*
 as semiconductor, 692
 specific heat of, 594*t*
- Silver (Ag)
 density, 419*t*
 Fermi energy, 1357*t*
 latent heats of fusion and vaporization, 598*t*
 resistivity, 814*t*
 specific heat, 594*t*
 thermal conductivity, 609*t*
 work function of, 1243*t*
- Similar triangles, 92
- Simple harmonic motion, **451**. *See also*
 Oscillatory motion
 applications, 459–460
 energy in, 458–461, *459*, *460*
 in object attached to spring, *451*, *451–452*
 pendulums, 464–468
 quantum-mechanical viewpoint on, 1239–1240, 1286–1288, *1287*
 standing wave as, 539
 uniform circular motion and, *462*, *462–464*, *463*
- Simple harmonic motion model, **452–458**, *453*, *455*
- Simple pendulum, *464*, **464–466**
- Simplification of problems, 45
- Simultaneity, and theory of relativity, *1199*, 1199–1200, 1208–1209, *1209*, 1211–1212
- Sine (sin), **A–11–A–12**, **A–12t**
- Single-slit aperture, resolution through, 1166, *1166*
- Single-slit diffraction patterns, 1161–1165, *1162*, *1164*
 light intensity distribution, 1164, *1164*
 position of fringes, *1162*, 1162–1164

- Sinusoidal electromagnetic waves, 1037–1038, 1038
- Sinusoidal waves, 487, 487–491
 general expression for, 489
 sound waves, 507
 speed of, 488, 491, 491–494
 on strings, 490, 490–491
 speed of, 491, 491–494
 superposition of, 535–536, 536
 wave function of, 488–489
- SI (*Système International*) units, 3, A-2t–A-3t, A-24t
 of acceleration, 8t, 31
 of activity, 1392
 of angular momentum, 339
 of area, 8t
 of average speed, 24
 of average velocity, 23
 of capacitance, 778
 of charge, 910
 conversion to U.S. customary units, 9
 of current, 809
 of current density, 811–812
 of electric charge, 694
 of electric field, 748
 of electric field vector, 700
 of electric flux, 726
 of electric potential, 748
 of energy, 591
 of force, 116
 of frequency, 454
 of gravitational potential energy, 192
 of inductance, 971
 of kinetic energy, 188
 of length, 4
 of linear momentum, 249
 of magnetic dipole moment, 887
 of magnetic field, 873
 of magnetic flux, 917
 of mass, 4–5, 5, 114, A-1t, A-24t
 of moment of inertia, 303
 of potential difference, 748
 of power, 232, 821
 of Poynting vector, 1039
 prefixes for, 5, 6t
 of pressure, 418
 for radiation, 1434, 1434t
 of resistance, 812
 of resistivity, 812
 of speed, 8t
 of temperature, 572
 of time, 5, 5
 of torque, 301
 of volume, 8t
 of work, 180
- Skerries SeaGen Array, 935
- Sky, color of, 1057, 1180–1181
- SLAC (Stanford Linear Accelerator), 1464
- Sliding bar, magnetic forces acting on, 940, 940–943, 942, 944–945, 945
- Slipher, Vesto Melvin, 1471
- Slip rings, 950, 950
- Slit(s), diffraction and interference
 from. *See* Diffraction; Double-slit interference patterns; Interference; Single-slit diffraction patterns
- Slope, A-8, A-8, A-10
 of position–time curve
 for constant velocity, 29, 29
 line between two points of, 24
 line tangent to, 25–26, 26, 27, 33, 33
 as rate of change ratio, 26
 units of, 26
 of velocity–time graph
 line between two points on, 31, 31
 line tangent to, 31, 32, 32, 33, 33
- Slug, 5
- Small angle approximation, 465, 465t
- Smith, George E., 1245
- Smoke detectors, 1399, 1399
- Snell, Willebrord, 1067
- Snell's law of refraction, 1067–1069, 1068, 1072, 1072, 1074
- Soap
 films, light interference in, 1144, 1144–1147, 1145
 surfactants in, 795
- Sodium (Na)
 electronic configuration, 1321
 emission spectrum, 1314–1315
 energy bands of, 1360, 1360–1361
 Fermi energy, 1357t
 isotopes, 1396t
 photoelectric effect for, 1245–1246
 work function of, 1243t
- Sodium chloride (NaCl)
 chemical components, 1321
 crystals, 1175, 1175, 1352–1354, 1353
 index of refraction, 1067t
 ionic bonding in, 1341–1342, 1342
 melting point of, 1354
- Solar cells
 nonreflective coating on, 1146–1147, 1147
 photon absorption in, 1366
 power generation with, 1366–1367
- Solar power, 613, 1041
- Solar sailing, 1042–1043
- Solar System, 406, 406–407
 dust particles in, 1042
- Solenoid
 electric field induced in, 948, 948–949
 ideal, 915–916, 916
 inductance of, 972
 magnetic field of, 915, 915–916
- Solid(s)
 amorphous, 1179, 1340
 band theory of, 1359, 1359–1361, 1360
 and electrical conduction, 1361–1364, 1361–1364
- bonding in, 1352–1355
 covalent, 1354, 1354–1355
 ionic, 1352–1354, 1353
 metallic solids, 1355, 1355
 characteristics of, 417
 crystalline, 1179, 1340 (*See also* Crystal(s))
 elastic properties of, 373–376
 indices of refraction in, 1067t
 specific heat, 594t
- Solidification, latent heat of, 598
- Solid solutions, metal, 1355
- Solid-state physics, 1340
- Somatic radiation damage, 1433
- Sonic boom, 522
- Sound level (β), 515–516, 515t
- Sound waves, 485, 507–522.
See also Hearing
 audible, 507
 Doppler effect, 517, 517–521, 518, 519
 infrasonic, 507
 intensity of, 512–517, 513
 interference of, 536, 536–538
 as longitudinal wave, 508, 508–509, 509, 547
 pressure variations in, 508, 508–510, 509
 shock waves (sonic boom), 522, 522
 sound level (β), in decibels, 515–516, 515t
 speed of, 510, 510–512, 512t
 ultrasonic, 507
- Source, of field-effect transistor, 1368, 1368
- Source charge, 699, 699
- Source particle, 392–393
- South pole
 of Earth, 870, 870–871
 of magnet, 868–869, 870
- South Pole Telescope, 1471
- Spacecraft
 conservation of angular momentum in, 352, 352
 escape speed, 404–405, 405t
 Hubble Space Telescope, 1160, 1169, 1169, 1367
 IKAROS (Interplanetary Kite-craft Accelerated by Radiation of the Sun), 1043
 Voyager 2, 352
- Space quantization, 1312–1317, 1313, 1315, 1317
- Space Station, International, weight of, 394
- Space–time
 distortion by gravity, 1221–1223
 string theory and, 1475
- Space–time coordinates, 1210–1211
- Space–time graphs, 1207, 1207–1209, 1209

- Space-time transformation equations
 Galilean, **1194**–1195
 Lorentz, **1210**–1212
- Spatial interference, 551
- Speakers
 crossover networks in, 1019
 interference in, 537–538, *538*
- Special theory of relativity. *See*
 Relativity, special
- Specific heat (c), 593–597, **594**, 594*t*. *See*
 also Molar specific heat
- Spectral analysis of materials, 1435
- Spectral lines, 1297
- Spectroscopy, atomic, 1171
- Spectrum
 electromagnetic, **1045**–1047, *1046*
 visible light, 1045*t*, *1046*, **1046**–1047,
1073, *1073*, *1074*
- Specular reflection, **1062**, *1062*
- Speed (v), 79, 83, 314*t*
 angular (ω), 92–93, 94, 294–295,
 296–297, 296*t*, 299, 314*t*
vs. angular frequency, 462
 average (ω_{avg}), **294**
 of charge in magnetic field, 876, 878
 instantaneous (ω), **295**
 average (v_{avg}), **24**–25
 as derived quantity, 5
 instantaneous, **26**
 of light (c), 4
 measurement of, 1059–1061
 Michelson–Morley experiment,
1196, 1196–1198
 relativity and, 1195–1198, *1196*,
 1198–1199
 of mechanical wave, 488, *491*,
 491–494, 511
 of molecules in gas, 639–643, *641*
 of sinusoidal wave, *49*, 488, 489,
 491–494
 of sound waves, *510*, 510–512, 512*t*
 tangential (v), 298, 299, 311
 terminal (v_T), *162*, **163**–167, 165*t*,
166, 166*t*
 transverse (v_t), **490**–491
 units of, 8*t*, A–1*t*
 of wave on string, *491*, 491–494
 in work–kinetic energy theorem,
 189–190
- Spherical aberration, 1093, *1093*,
1113, *1113*
- Spherical capacitors, capacitance of,
781, 781–782
- Spherical coordinates, 1277
- Spherical mirrors, image formation in
 concave mirrors, *1093*, 1093–1095,
1094, 1098–1099
 convex mirrors, *1095*, 1095–1096,
 1099–1100, *1100*
- Spherical polar coordinates, 1306, *1306*
- Spherical waves, **513**, *513*, **1035**
- Spin, of atomic particles, **920**, *920*
- Spin angular momentum,
1316–1317, *1317*
 of nucleus, *1406*, 1406–1407
- Spin down, 1315, *1315*
- Spin magnetic moment, of electron,
 1317, *1317*
- Spin magnetic quantum number (m_s),
1314, **1316**
 physical interpretation of,
 1314–1317, *1315*
- Spin–orbit effects, nuclear, 1390
- Spin up, 1315, *1315*
- Spontaneous decay, **1395**
- Spontaneous emission, **1325**, *1325*
- Sports
 acrobatics, 346
 archery, *251*, 251–252, 277
 baseball, 166–167, 434
 basketball, 23, *23*
 bowling, 343
 diving, 346
 drag racing, *21*
 gasing, *293*
 golf, 434, *434*
 hiking, 69–70
 hockey, *116*, 116–117, *133*, 133–134
 ice skating, 338, *338*, 339, 346, *346*
 long jump, 87
 motorcycle racing, *335*
 NASCAR, *150*
 pool/billiards, 257, 264, 390–391
 and projectile motion, 85
 running, 29–30
 scuba diving, 1102
 sculling, *111*
 seesaws, 344–345, 367–368
 skiing, 90–91
 skydiving, 41
 skysurfing, 165, *165*
 swimming, 421–422
- Spreading, of energy, and entropy, 672
- Spring(s)
 compression, 229–230
 as conservative force, 197
 and elastic potential energy,
194–196, *195*
 Hooke's law, **185**, 187, 199, **451**, 456
 potential energy function for, 198–199
 simple harmonic motion in, *451*,
 451–452
 wave motion in, 484, *484*
 work done by, *185*, 185–187, *187*,
 187–188, 189–190
- Spring constant (force constant; k),
 185–186, *187*, 187–188,
 220–221, 456
- Spring force (F_s), 185
- Spring scales
 measurement of force with,
 112–113, *113*
 measurement of weight with,
 126–127, *127*
- Square barriers, **1281**, *1281*
- Square waves, 554, *554*
- Square well, **1278**
 of finite height, particle in, *1279*,
 1279–1281, *1280*
- Squarks, 1476
- Stable equilibrium, **200**, *200*
- Standard Model, 1467–1469, **1468**, *1468*
- Standards of measurement, 3–6, 5
- Standing waves, *538*, **538**–541, *539*, *540*
 in air columns, 546–549, *547*
 under boundary conditions, *541*,
 541–545, *542*
 in membranes, 550, *550*
 in rods, 550, *550*
 on strings, 541–543, *542*
- Stanford Linear Accelerator
 (SLAC), 1464
- Stanford Linear Collider, 1468
- STAR (Solenoidal Tracker at RHIC)
 detector, *1469*
- Stars
 fusion in, 1425
 neutron, 347, 405–406
 Star HR8799, 1122, *1122*
 supernovas, 347, 405–406
 white dwarf, 405
- State variables, **601**
- Static equilibrium
 conditions for, 364–365
 examples of, 366–372
- Static friction, *130*, 130–**131**
 coefficient of static friction,
131–133, 132*t*
- Stationary states, **1301**
- Statistical mechanics, 635, *640*, 667–668
- Steady (laminar) flow, *427*, **427**–428, *428*
- Steam
 energy stored in, 599, 600–601
 specific heat, 594*t*
- Steam engine, 664–665
- Steam point of water, 571, *572*
- Steel, average expansion coefficient, 575*t*
- Stefan–Boltzmann constant (σ), 1234
- Stefan's law, **613**, **1234**–1235, 1238
- Step-down transformers, 1016
- Step-up transformers, 1016
- Stern, Otto, *1315*, 1315–1316
- Stern–Gerlach experiment, *1315*,
 1315–1316, 1317
- Stiffness of spring, 185
- Stimulated absorptions, *1325*, **1325**–1326
- Stimulated emission, **1325**–1327
- Stonehenge, 2
- Stopping potential, **1241**, *1241*
- Stop signs, reflective coating of,
 1064, *1064*
- Strain, **373**
 shear, **374**
 stress and, 373
 tensile, **373**, *374*
 volume, **375**

- Strangeness, **1460**, 1461, 1461
 conservation of, **1460**
- Strange particles, 1459, 1459–1460
- Strange quark (s), 7, **1462**, 1463*t*, 1464*t*
- Strassman, Fritz, 1301, 1419
- Streamline, **428**, 428
- Stress, **373**
 shear, **374**, 374
 strain and, 373
 tensile, **373**, 374
 volume, **375**, 375
- Stress analysis, optical, 1179–1180, 1180
- Strings
 energy transfer by waves on, 495, 495–497
 linear wave equation for, 497–498
 propagation of waves on, 484, 484–487, 485
 reflection of waves on, **494**, 494, 495
 sinusoidal waves on, 490, 490–491
 speed of waves on, 491, 491–494
 standing waves on, 538–545, 539, 542
 tension on, 491, 491, 543
 transmission of waves on, **494**–495, 495
- String theory, **1475**–1476
- Stroboscopic photography, 35, 35
- Strong force
 and classification of particles, 1454, 1455
 definition of, 1454
 evolution of, at origin of Universe, 1469, 1470
 field particles for, 1466–1467
 as fundamental force, 112, 1454, 1464–1465
 in Standard Model, 1468, 1468
- Strontium, isotopes, 1397*t*
- Structural models, 627
 of electrical conduction, 816–818
- Stud finders, 792, 792
- Subcritical reaction, 1422
- Subshells, atomic, **1307**, 1308*t*
 filling of, 1318–1320, 1318*t*, 1319
- Subtraction
 of fractions, A–6
 significant figures in, 12
 and uncertainty, A–21
 of vectors, 63, 63–64
- Sulfur (S)
 isotopes, 1396*t*
 latent heats of fusion and vaporization, 598*t*
 resistivity of, 814*t*
- Sun
 atmosphere, analysis of gases in, 1297–1298
 electromagnetic radiation from, 613
 escape speed, 405*t*
 fusion in, 1425
 magnetic field of, 873*t*
 mass of, 5*t*, 398–399
 planetary data, 398*t*
 temperature of, 572
 wavelength of radiation from, 1239
- Sunburn, 1046
- Sunglasses
 polarized, 1178
 UV protection and, 1046
- Sunlight
 energy delivered to Earth by, 1041
 polarization of, 118, 1178, 1180–1181
- Superconductors, 819, **819**–820, 820, 820*t*, 868, 873*t*, 1370, **1370**–1371
 high-temperature, 1371
 Meissner effect in, 922, 922, 1370, 1370
- Supercooling, **599**–600
- Supercritical reaction, 1422
- Superheating, **600**
- Super Kamiokande neutrino detection facility, 1457
- Supernovas, 347, 405–406
- Superposition principle, **534**, **537**
 for electric fields, 701, 702–703
 for mechanical waves, **534**–538, 535, 536
- Super Proton Synchrotron, 1468
- Super string particles, 1474
- Supersymmetry (SUSY), 1476
- Surface charge density (σ), **704**–705
 of conductor of arbitrary shape, 761, 761–762, 763
 of spherical conductor, 762, 762
- Surface effect, in liquid-drop model of nucleus, 1387
- Surface integral, 726
- Surface mass density (σ), 308
- Surfactants, 795
- S waves, **485**
- Swim bladder, in fish, 424–425
- Switch, symbol for, 782
- Symbols. *See* Notation
- Symmetric molecules, induced polarization of, 795, 795
- Symmetry breaking, 1468, 1469
- Symmetry effect, in liquid-drop model of nucleus, 1388
- Synchrotrons, 881
- System(s), **178**. *See also* Isolated system; Nonisolated system
 angular momentum in, 340–342
 deformable
 conservation of angular momentum in, 345–346, 346
 elastic properties of solids, 373–376
 motion of, 275–277
 work in, 179
 and work–kinetic energy theorem, 189
 equilibrium of, 199–201, 200, 201
 identification of, 178
 of molecules, internal energy of, 635, 635–637, 636, 637
 of particles, motion of, 272–274
 potential energy of, 191–196, **192**, 192
- System boundary, **178**
- System model, 178
- Tabular representation, 22, 22*t*
- Tacoma Narrows Bridge, 470, 470
- Tangent (tan), A–11–A–12, A–12*t*
 on calculators, 67
- Tangential acceleration, 94, **94**–95, 156–158, 157, 298–299, 299, 303
- Tangential speed (v), 298, 299, 311
- Tangential velocity, 298, 298
- Tau (τ^-), 1454*t*, 1455, 1464, 1464*t*
- Tau lepton number, conservation of, 1458
- Tau–neutrino (ν_τ), 1454*t*, 1455, 1458, 1464*t*
- Taylor, J. B., 1316
- Telescopes
 atmospheric blurring, 1160, 1169, 1169
 Hubble Space Telescope, 1160, 1169, 1169, 1367
 Keck Observatory, 1122, 1122, 1168
 magnification in, 1120, **1120**–1122, 1121
 photoelectric photometry and, 1245
 radio, 1169
 resolution of, 1168–1169, 1169
 Yerkes Observatory, 1122
- Television
 broadcast frequencies, 1046
 color production in, 1116
 picture tube, magnetic field in, 874
 remote control, infrared LED in, 1367
- Temperature (T), 568–580, **570**
 and atomic energy levels, 639–640
 and blackbody radiation, 1234–1235, 1235
 critical, **819**–820, 820*t*
 and density, 419, 577, 577
 and entropy, 671
 and frequencies of instruments, 548
 and internal energy, 594, 630, 632
vs. internal energy and heat, 591
 measurement of, 569, 570–573
 molecular interpretation of, 630–631
 physical properties changed by, 570
vs. pressure and volume, in ideal gas, 578–579
 and resistance, 817–819, 819
 and resistivity, 813, 814*t*
 sensation of, 568–569
 and specific heat, 594
 and speed of sound waves, 511–512, 512*t*
 thermal equilibrium, **569**–570
 thermal expansion, 568, 573, **573**–578, 575, 575*t*
 units of, 3, A–24*t*
 zeroth law of thermodynamics, 568–570, **569**, 569

- Temperature coefficient of resistivity
(α), 814*t*, **819**
- Temperature gradient, **609**
- Temperature scales
absolute, 571–572, 572
Celsius, **571**, 572, 573
conversion of, 572–573
Fahrenheit, **572**, 573
Kelvin, **572**, 572
- Temporal interference, 550–552, 551
- Tensile strain, **373**, 374
- Tensile strength, 376
- Tensile stress, **373**, 374, 376
- Tension (T), **120–121**, 121, 122,
122–123, 491, 491, 543
- Terminal speed (v_T), 162, **163–167**, 165*t*,
166, 166*t*
- Terminal voltage, 834–835
- Tesla (T), **873**
- Tesla, Nikola, 1016
- Test charge, 699, 699
- Test particle, 392–393
- Tevatron, 1468
- Theorem of equipartition of energy,
630, 635–637
- Theory of Everything, 1475
- Thermal conduction, 609, **609–611**, 610
entropy in, 674–675, 677
home insulation, 611–612, 611*t*
law of, **609–610**
- Thermal conductivity (k), **609–611**, 609*t*
- Thermal contact, 569, **569–570**
- Thermal efficiency (e), **655–656**
of Carnot engine, 660–664
of diesel engines, 667
of Otto cycle, 666, 667
of steam engine, 664–665
- Thermal electrical shorts, 576–577
- Thermal energy, 591
- Thermal equilibrium, **569–570**
- Thermal expansion, 568, 573, **573–578**,
575, 575*t*
- Thermal expansion joints, 573, 573
- Thermalization, of neutrons, 1419
- Thermal neutrons, **1419**
RBE factors for, 1434*t*
- Thermal radiation, **613–614**. *See also*
Blackbody radiation
quantum effects in, 1234–1239
- Thermodynamic processes, work and
heat in, 601–603
- Thermodynamics, 567, 590. *See also*
Entropy; Heat; Kinetic theory
of gases; Temperature
applications, 567
first law of, **603–604**, 653
applications, 604–608
history of theory, 2–3
as physics subdiscipline, 1
second law of, 653–654, 676–678
Clausius statement of, **657**, 676
entropy statement of, 676
equivalence of statements of,
676–677
Kelvin–Planck form of, **655**, 657,
660, 677
zeroth law of, 568–570, **569**, 569
- Thermodynamic systems, changes of
entropy for, 671–678
- Thermodynamic variables, of ideal
gas, **579**
- Thermometers, 569, 569, 570,
570–573, 571
alcohol, 570–571
calibration of, 570–571
constant-volume gas, 571, 571–572
ear, 1238, 1238
limitations of, 571
mercury, 570, 570–571
- Thermonuclear fusion reactions, **1425**
- Thermos bottle, 614, 614
- Thermostats, mechanical, 575, 575
- Thin films. *See* Films
- Thin lens. *See* Lens(es)
- Third law, Kepler's, 397, 397–398
- Third law of motion, Newton's,
118–120, 119
- Thompson, Benjamin, 592
- Thomson, G. P., 1250–1251
- Thomson, Joseph John, 7, 881, 881,
1299, 1299
- Thorium (Th)
isotopes, 1397*t*
radioactive series, 1404, 1404, 1404*t*
- Three-pronged electrical cords, 854, 854
- Three-way lightbulbs, 839, 839
- Threshold energy, **1405**
- Threshold of hearing, 514, 515, 516, 517
- Threshold of pain, 514, 515, 516–517, 517
- Thrust, **278**
- Thunderstorm, estimating distance
to, 512
- Tidal energy generator, 935
- Timbre (quality), 553
- Time (t), 5–6. *See also* Clocks
and general relativity, 1222
Lorentz space–time transformation
equations, **1210–1212**
sample values of, 5*t*
space–time graphs, 1207,
1207–1209, 1209
and special relativity
dilation of, 1200, 1200–1204, **1201**,
1206, 1209, 1211–1212
proper time interval, **1202**, 1206
relativity of, 1199, 1199–1200
symbol for, 7
units of, 3, 5, 5, A–1*t*, A–24*t*
- Time-averaged net force, 253, 253–254
- Time constant (τ), 162, **163–164**, 166
of RC circuit, 848–849, 851
of RL circuit, 974, 975–976
- Time-independent Schrödinger
equation, 1277–1279, **1278**
- Time response, of circuits, 974
- Ting, Samuel, 1464
- Tokamak, 1429, **1429–1430**
- Tokamak Fusion Test Reactor (TFTR),
1429, 1430
- Tomonaga, Sin Itiro, 1452
- Toothbrush, electric, mutual induc-
tance, 979, 979–980
- Top(s), 350, 351
- Topness, 1464
- Top quark (t), 7, 1463*t*, **1464**
- Toroid, magnetic field of, 914, 914–915
- Torque ($\vec{\tau}$), 300, **300–302**, 301
and angular momentum, 338–339,
340–341, 350–351, 351
axis of rotation, 301
on current loop in magnetic field,
885, 885–889, 886, **887**, 887
direction of vector, 336, 337–338
on electric dipole in electric field,
793, 793–794, 796
vs. force, 301
on magnetic moment in magnetic
field, **887**
net, 301–302, 314*t*
and angular acceleration, 302–307
rigid object under a net torque
model, 302–307, **304–305**
and rotational equilibrium, 364–365
and torsional pendulums,
467–468, 468
- Torricelli, Evangelista, 423
- Torricelli's law, 432–433
- Torsional pendulum, 467–468, 468
- Torsion balance, 694, 694
- Torsion constant (κ), 467
- Total energy, **1217–1220**
- Total force. *See* Net force
- Total instantaneous energy density, of
electromagnetic waves, 1040
- Total internal reflection, 1074–1076,
1074–1076
applications, 1075–1076, 1076
- Tracers, radioactive, 1434–1435, 1435
- Trajectory, 84, 85, 86, 86
- Transfer variables, **601**
- Transformation equations
space–time
Galilean, **1194–1195**
Lorentz, **1210–1212**
velocity
Galilean, 97, **1195**, 1196
Lorentz, 1212–1214, 1213
- Transformation mechanism, for
energy, 97
- Transformer(s), 822, 998
AC, 1015, 1015–1018, 1016, 1017
eddy currents in, 954
- Transistors, 1364, 1368, 1368–1369
- Transitions
allowed, 1322, 1322
forbidden, 1322

- of molecules, between rotational energy levels, 1345–1346
 spontaneous emissions, **1325**, 1325
 stimulated absorption, **1325**, 1325, 1326
 stimulated emissions, **1325**–1327, 1326
- Translational motion, 21
 equations for, 314*t*
 in rolling motion, 316–321, 317
 work–kinetic energy theorem and, 189
- Transmission, of electrical power, 822, 1015, 1017, 1017–1018
 corona discharge in, 763–764, 766, 766
 as energy transfer, 212, 213
 and I^2R loss, 822, 822
- Transmission, of waves, **494**–495, 495
- Transmission axis, 1176, 1177
- Transmission coefficient (T), **1281**–1282
- Transmission electron microscope, 1251, 1252
- Transmission grating, 1169
- Transportation. *See* Airplanes; Automobiles; Railroads; Satellites; Spacecraft
- Transuranic elements, 1404, 1422
- Transverse acceleration (a_y), **490**–491
- Transverse speed (v_y), **490**–491
- Transverse wave, 484, **484**–485
- Traveling wave, **487**
- Traveling wave model, 487, 487–491
- Triangle(s)
 geometric properties of, A–11, A–11, A–11*t*
 similar, 92
- Trigonometry, A–11–A–13
 identities for, A–12*t*
- Triple point of water, **572**
- Tritium, fusion and, 1426–1428, 1428, 1430, 1431, 1431, 1432
- Trough, of wave, **487**, 487
- Truth quark, 1464
- Tube of flow, 428
- Tungsten
 in lightbulb filaments, 837
 resistivity, 814*t*
- Tuning fork, 549, 549, 553, 553, 554
- Tunneling, 1281, **1281**–1282, 1399, 1399
 applications, 1267, 1282–1286
- Turbulent flow, **427**, 427
- Turning points, 200, 200
- Twin paradox, 1204–1205, 1205, 1207, 1207
- Uhlenbeck, George, 1315, 1316
- Ukraine Radiological Institute, 1424
- Ultrasonic sound waves, 507
- Ultraviolet catastrophe, 1236
- Ultraviolet waves, **1046**, 1046
- Unbalanced force. *See* Net force
- Uncertainty
 estimation of, A–20–A–21
 of microstates, 668–671
 propagation of, **A–20**–A–21
- Uncertainty principle. *See* Heisenberg uncertainty principle
- Underdamped oscillation, **469**, 469
- Uniform circular motion, 91, **91**–94
 acceleration in, 91, 91–92, 150–156
 angular momentum in, 339–340
 angular speed of, 92–93, 94
 force in, 151, 151–156
 period of, **92**, 93
 second law of motion in, 151–156
 and simple harmonic motion, 462, 462–464, 463
- United Nations Environmental Programme, 1352
- Units. *See also* SI (*Système International*) units; U.S. customary units
 conversion of, 9–10, A–1*t*–A–2*t*
 in equations, inclusion of, 9
- Unit vectors (\hat{i} , \hat{j} , \hat{k}), 66, **66**–67
 cross products of, 336
 scalar products of, 182
- Universal gas constant (R), **579**, 633
- Universal gravitation. *See* Gravitation
- Universal gravitational constant (G), **389**
- Universe
 critical density of, 1472–1473
 dark energy in, 1474
 dark matter in, 1474
 entropy of, 676, 678
 expansion of, 1471–1474
 heat death of, 678
 microwave background radiation in, 1470, 1470–1471, 1471
 missing mass in, 1473–1474
 origin, Big Bang theory of, 1469–1470, 1470
- Unknowns, **A–5**
- Unpolarized light beams, **1175**–1176, 1176
- Unstable equilibrium, **200**, 200
- Up quark (u), 6, 7, **1462**, 1463*t*, 1464*t*
- Uranium (U)
 decay of, 1395, 1399
 density of, 419*t*
 enrichment of, 1422, 1423
 fission of, 1419–1421, 1420
 in fission reactors, 1219–1220, 1421, 1421–1423, 1423
 isotopes, 1397*t*
 radioactive series, 1404, 1404*t*
- Uranus
 escape speed, 405*t*
 orbit of, 406
 planetary data, 398*t*
- U.S. customary units, 5, 8*t*, 59, 116, 232, 611–612
 conversion to SI units, 9
- Vacuum, dielectric constant and dielectric strength of, 791*t*
- Vacuum tubes, 1364
- Valence band, 1361–1363, **1362**–1364
- Van Allen radiation belt, 879, 879
- Van de Graaff, Robert J., 765
- Van de Graaff generators, 765, 765
- Van der Meer, Simon, 1454
- Van der Waals bonding, 1343
- Van der Waals forces, **1343**
- Vaporization, latent heat of, **598**, 598*t*
- Variable(s)
 state, **601**
 transfer, **601**
- Variable capacitors, 792, 792
- Varuna, 398
- Vector(s)
 addition of, 80
 component method, 67, 67–69
 graphical method, 62, 62–63, 64–65
 components of, 65, **65**–70
 displacement, **79**, 79
 equality of, 62, 62
 multiplication by scalar, 64
 negative of, 63
 notation for, 61
 position, **67**, **78**–79, 79, 81
 as function of time, 81–82, 82, 83–84
 of projectile, 84, 85
 properties of, 62–65
 resultant, **62**
 scalar (dot) product of, 181, **181**–183
 subtraction of, 63, 63–64
 unit, 66, **66**–67
 vector (cross) product of, **335**–338, 336
 determinant form, 336–337
 velocity, as function of time, 81–82, 82, 83
- Vector model, **1312**, 1313
- Vector (cross) product, **335**–338, 336
 determinant form, 336–337
- Vector quantity, **23**, **61**, 61
 direction of, 23
 force as, 112–113, 113
- Velocity (\vec{v}), 26
 angular, 295–296, 296, 298, 298
 average (\vec{v}_{avg}), **23**–25, 26–28, 36, **79**, 80
 of center of mass (\vec{v}_{CM}), **272**
 in elastic collisions, 258–259
 instantaneous (v_x), 25–28, **26**, 26, **79**–80, 80
 as function of time, 81–82, 82, 83
 of particle under constant acceleration, 36, 36, 37, 38, 44
 of particle under constant velocity, 29
 relative, 96, 96–98, 97
 in simple harmonic motion, 454, 455, 455–456, 459
 tangential, 298, 298
- Velocity selector, 880, 880
- Velocity–time graph
 relation to acceleration–time graph, 33, 33
 relation to position–time graph, 33, 33

- Velocity–time graph (*continued*)
 slope of line between two points of, 31, 31
 slope of line tangent to, 31, 32, 32, 33, 33
- Velocity transformation equations
 Galilean, **97**, **1195**, 1196
 Lorentz, 1212–1214, 1213
- Venturi tube, 432, 432
- Venus
 escape speed, 405*t*
 orbit of, 406
 planetary data, 398*t*
- Vibrational motion
 of molecule, 635, 635–637, 636, 637, 1347, 1347–1349, 1348
 as motion type, 21
- Vibrational quantum number (v), 1347
- VIRGO, 1149
- Virtual image, **1091**
- Virtual object, **1104**, 1111
- Virtual photons, 1452, 1452–1453
- Viscosity, **427**
- Viscous force, 162, 162–164, 427
- Visible light spectrum, 1045*t*, 1046, **1046**–1047, **1073**, 1073, 1074
- Vitreous humor, 1115
- Volt (V), **748**
- Voltage (ΔV), **748**
 across capacitor in AC circuit, 1005, 1005–1006
 across inductor in AC circuit, 1002–1004, 1003
 across resistor in AC circuit, 999–1000, 1000
 of alternating current, 1001
 open-circuit, **834**
 in *RLC* series circuit, 1007, 1007–1011, 1008
 terminal, 834–835
- Voltage amplitude, of AC source, **999**
- Volume (V)
 of geometric shapes, A–11*t*
vs. pressure and temperature, in ideal gas, 578–579
PV diagrams, **602**, 602
 thermal expansion and, 574–575, 575
 units of, 8*t*
- Volume charge density (ρ), **704**–705
- Volume effect, in liquid-drop model of nucleus, 1387
- Volume expansion, average coefficient of (β), **574**–575, 575*t*
- Volume flux (flow rate), 428
- Volume strain, **375**
- Volume stress, **375**, 375, 376
- Volumetric mass density (ρ), 308
- Water
 density, 419*t*
 density *vs.* temperature curve, 577, 577–578
 dielectric constant and dielectric strength of, 791*t*
 freezing of, 577–578
 ice point of, 571, 572
 index of refraction, 1067*t*, 1102
 latent heats of fusion and vaporization, 598–599, 598*t*
 molar specific heat, 633*t*
 phase change in, 598–599, 599
 specific heat, 594–595, 594*t*
 speed of sound in, 512*t*
 steam point, 571, 572
 supercooling, **599**–600
 superheating, **600**
 thermal conductivity, 609*t*
 triple point, **572**
 view from underneath, 1075, 1075
 view into, and refraction, 1103, 1103–1104
 waves in, 483, 485, 485, 1135, 1135
- Water molecule
 hydrogen bonding of, 1343–1344
 polarization of, 794, 794–795
- Watt (W), **232**, 821
- Watt, James, 232
- Wave(s), 483–498. *See also* Electromagnetic waves; Light waves; Mechanical waves; Sinusoidal waves; Sound
 constructing particles from, 1252–1255, 1253, 1254, 1475–1476
 as energy transfer, 484
 Fourier analysis of, 553–554, 1148–1149
 interference, **534**–538, 535, 550–552, 551
 linear, 534
 linearly polarized, **1035**, 1035
 linear wave equation, 497–498
 longitudinal, 484, **484**–485, 508, 508–509, 509
 nonlinear, 534
 nonsinusoidal, 553, 553–554, 554
 power of, 496
 propagation of, 484, 484–487, 485
 reflection of, **494**, 494, 495
 resonance, 470, **470**–471, **546**, 546, 548
 speed of, 488
 on strings, 491, 491–494
 spherical, **513**, 513, **1035**
 square, 554, 554
 standing, 538, **538**–541, 539, 540
 in air columns, 546–549, 547
 under boundary conditions, 541, 541–545, 542
 in membranes, 550, 550
 in rods, 550, 550
 on strings, 541–543, 542
 transmission of, **494**–495, 495
 transverse, 484, **484**–485
 traveling wave model, 487, 487–491
 types, 483
 water, 483, 485, 485, 1135, 1135
 wave function, **485**–486
 of sinusoidal wave, 488–489
- Wave equation, linear, 497–498, 1037
- Waveform. *See* Wave function
- Wave front, **513**, 513, **1035**
- Wave function, **485**–486
 for sinusoidal wave, 488–489, 491
- Wave function (probability amplitude; Ψ), **1268**–1271
 band theory and, 1359, 1359–1361, 1360
 boundary conditions for, 1278
 of covalent bond, 1342, 1342–1343
 expectation value, **1270**, 1271, 1275–1276
 for hydrogen, 1308–1311
 ground state, 1308
 2*s* state, 1311
 normalized, **1270**
 one-dimensional, 1269, 1269–1271, 1270
 of particle in box, 1272–1277, 1273
 for particle in finite well, 1279, 1279–1281, 1280
 of simple harmonic oscillator, 1286
 space-and-time dependent, 1268
- Wave intensity (I), of electromagnetic waves, 1040, 1041
- Wavelength (λ), 487, **487**, **491**
 of blackbody radiation, 1234–1240, 1235, 1236, 1237
 Compton (λ_C), **1247**
 cutoff (λ_c), **1244**
 de Broglie, 1250–1251
 of electromagnetic waves, 1037–1038, 1038–1039
 index of refraction and, 1067, 1067, 1072, 1072–1073, 1073
 of light
 and color, 1045*t*
 measuring, 1138–1139, 1145, 1147–1148, 1170, 1171
 particle model and, 1249
 of normal modes, 542, 542
 of quantum particle in a box, 1272–1273, 1276
 of sound wave, 509, 513, 513
 of x-ray radiation, 1322, 1322–1324
- Wavelets, 1070–1071
- Wave model, 487, **487**–491
 of light, *vs.* particle model, 1246, 1249
 of particles, 1249–1252
 and principle of complementarity, 1250
- Wave number (k), **488**, **491**, 509
 of electromagnetic waves, 1037
- Wave optics, 1134
- Wave packet, 1253, 1253–1255, 1254
 group speed of, **1254**–1255
 phase speed of, **1254**

- Waves in interference analysis model, 534–538, 535, **537**, 1137, 1137–1140, **1139**
- Waves under boundary conditions model, 541, 541–545, 542, **543**
- Wave under reflection analysis model, 1061–**1065**, 1062, 1063
- Wave under refraction analysis model, 1065, 1065–1071, 1066, 1067, **1068**
- W bosons, 1448, 1449*t*, 1454, 1467–1468, 1468
- Weak charge, 1467
- Weak force
- electroweak theory and, 1467–1468
 - evolution of, at origin of Universe, 1469, 1470
 - field particles for, 1448, 1449*t*, 1453, 1454
 - as fundamental force, 112, 1448
 - in Standard Model, 1467–1468, 1468
- Weakly interacting massive particles (WIMPs), 407
- Weber (Wb), 917
- Weight, **117**–118
- vs.* mass, 115, 117–118, 118
 - measurement with spring scale, 126–127, 127
- Weinberg, Steven, 1467
- Wells, **1278**–1279
- of infinite height, particles in, 1271–1277, 1272, 1273, 1274
 - nanotechnology and, 1280–1281
 - quantum particles in, 1271–1277, 1272, 1273, 1274
 - analogy to standing waves, 1276
 - analysis model for, 1276–**1277**
 - free electron theory of metals, 1355–1359, 1356, 1357
 - Schrödinger equation and, 1278–1279, 1280
 - well of finite height, 1279, 1279–1281, 1280
 - well of infinite height, 1271–1277, 1272, 1273, 1274
 - square, **1278**
 - of finite height, particle in, 1279, 1279–1281, 1280
- “What If?” questions, in problem solving, 47
- Wheelchairs, 371, 371–372
- Whirlpool galaxy, 388, 406
- White dwarf star, 405
- White light
- dispersion and, 1072, 1073, 1073
 - visual perception of, 1116
- Wien’s displacement law, **1235**, 1238–1239
- Wilkinson Microwave Anisotropy probe, 1471
- Wilson, Charles, 1246
- Wilson, Robert W., 1470, 1470–1471
- WIMPs. *See* Weakly interacting massive particles (WIMPs)
- Windmills, 177, 189
- Wind power, 177
- Windshield wipers, intermittent, 850
- Wire-wound resistors, 812
- Wood
- specific heat, 594*t*
 - thermal conductivity, 609*t*
- Work (W), **179**, 314*t*
- in adiabatic process, 604–605
 - to charge capacitor, 787, 787
 - by conservative force, 197–198, 198–199
 - by constant force, 178–181, 179, 180, 183
 - in cyclic process, 604
 - in deformable systems, 179
 - and displacement, 179
 - in electric field, 747–748, 750, 752–754
 - as energy transfer, 180, 190, 212, 212
 - in fluid flow, 430–431
 - by friction, 196–197, 198, 198, 222
 - on gas, 601, 601–608, 602, 603
 - by gravitational force, 197, 215
 - by heat engine, 655–656
 - in isobaric process, 605, 607–608
 - in isothermal process, 605–606, 606
 - in isovolumetric process, 605
 - and kinetic energy. *See* Work–kinetic energy theorem
 - by magnetic field on displaced particle, 873
 - net (ΣW), 184, 184–185, 188–190, 314, 314*t*
 - by nonconservative force, 198, 198
 - path-dependent, 198, 198
 - path-independent, 189, 191, 193, 197, 198
 - and potential energy function, 198–199
 - in rotational motion, 313, 314, 314*t*
 - as scalar, 179, 181
 - by spring, 185, 185–187, 187, 187–188, 189–190
 - units of, 180
 - by varying force, 183–188, 184
- Work function (ϕ), of metal, 1243, 1243*t*
- Working voltage of capacitor, 791
- Work–kinetic energy theorem, 188–191, **189**, 212, 214, 215, 275
- relativistic form of, 1216–1217
 - for rotational motion, 189, **313**–314
- World Health Organization, 1437
- World line, **1207**, 1207, 1209, 1209
- World Meteorological Organization, 1352
- Xenon (Xe)
- electronic configuration, 1320, 1321
 - isotopes, 1397*t*
- Xi (Ξ) [particle], 1454*t*, 1455, 1464*t*
- X-rays, **1046**
- bremsstrahlung, 1323, 1323, 1428
 - and cellular damage, 1408, 1433, 1434*t*
 - characteristic, 1322, **1323**–1325
 - diffraction by crystals, 1174, 1174–1175, 1175
 - electron speed in, 748
 - and food preservation, 1436
 - line spectra, 1322, 1322–1325
 - medical uses of, 1323, 1323–1324
 - scattering from electrons, Compton effect in, **1246**–1248, 1246, 1247
- X-ray spectra, 1322, 1322–1325
- Yard, 4
- Yerkes Observatory, 1122
- y -intercepts, **A-8**, A-8, A-10, A-10
- Y meson, 1464
- Young, Thomas, 1059, 1134, 1138
- Young’s modulus (Y), **373**–374, 374*t*
- Yukawa, Hideki, 1451, 1451–1452, 1453
- Z bosons, 1448, 1449*t*, 1453, 1454, 1467–1468, 1468
- Zeeman effect, 1313, 1313–1314
- Zero
- absolute, **572**
 - as significant figures, 12
- Zeroth law of thermodynamics, 568–570, **569**, 569
- Zeroth-order maximum, 1138, 1170
- Zinc (Zn)
- isotopes, 1397*t*
 - work function of, 1243*t*
- Zweig, George, 1462, 1463

Conversions

Length

1 in. = 2.54 cm (exact)
 1 m = 39.37 in. = 3.281 ft
 1 ft = 0.304 8 m
 12 in. = 1 ft
 3 ft = 1 yd
 1 yd = 0.914 4 m
 1 km = 0.621 mi
 1 mi = 1.609 km
 1 mi = 5 280 ft
 1 μm = 10^{-6} m = 10^3 nm
 1 light-year = 9.461×10^{15} m

Area

1 m² = 10^4 cm² = 10.76 ft²
 1 ft² = 0.092 9 m² = 144 in.²
 1 in.² = 6.452 cm²

Volume

1 m³ = 10^6 cm³ = 6.102×10^4 in.³
 1 ft³ = 1 728 in.³ = 2.83×10^{-2} m³
 1 L = 1 000 cm³ = 1.057 6 qt = 0.035 3 ft³
 1 ft³ = 7.481 gal = 28.32 L = 2.832×10^{-2} m³
 1 gal = 3.786 L = 231 in.³

Mass

1 000 kg = 1 t (metric ton)
 1 slug = 14.59 kg
 1 u = 1.66×10^{-27} kg = 931.5 MeV/ c^2

Force

1 N = 0.224 8 lb
 1 lb = 4.448 N

Velocity

1 mi/h = 1.47 ft/s = 0.447 m/s = 1.61 km/h
 1 m/s = 100 cm/s = 3.281 ft/s
 1 mi/min = 60 mi/h = 88 ft/s

Acceleration

1 m/s² = 3.28 ft/s² = 100 cm/s²
 1 ft/s² = 0.304 8 m/s² = 30.48 cm/s²

Pressure

1 bar = 10^5 N/m² = 14.50 lb/in.²
 1 atm = 760 mm Hg = 76.0 cm Hg
 1 atm = 14.7 lb/in.² = 1.013×10^5 N/m²
 1 Pa = 1 N/m² = 1.45×10^{-4} lb/in.²

Time

1 yr = 365 days = 3.16×10^7 s
 1 day = 24 h = 1.44×10^3 min = 8.64×10^4 s

Energy

1 J = 0.738 ft·lb
 1 cal = 4.186 J
 1 Btu = 252 cal = 1.054×10^3 J
 1 eV = 1.602×10^{-19} J
 1 kWh = 3.60×10^6 J

Power

1 hp = 550 ft·lb/s = 0.746 kW
 1 W = 1 J/s = 0.738 ft·lb/s
 1 Btu/h = 0.293 W

Some Approximations Useful for Estimation Problems

1 m \approx 1 yd
 1 kg \approx 2 lb
 1 N \approx $\frac{1}{4}$ lb
 1 L \approx $\frac{1}{4}$ gal
 1 m/s \approx 2 mi/h
 1 yr \approx $\pi \times 10^7$ s
 60 mi/h \approx 100 ft/s
 1 km \approx $\frac{1}{2}$ mi

Note: See Table A.1 of Appendix A for a more complete list.

The Greek Alphabet

Alpha	A	α	Iota	I	ι	Rho	P	ρ
Beta	B	β	Kappa	K	κ	Sigma	Σ	σ
Gamma	Γ	γ	Lambda	Λ	λ	Tau	T	τ
Delta	Δ	δ	Mu	M	μ	Upsilon	Υ	υ
Epsilon	E	ϵ	Nu	N	ν	Phi	Φ	ϕ
Zeta	Z	ζ	Xi	Ξ	ξ	Chi	X	χ
Eta	H	η	Omicron	O	o	Psi	Ψ	ψ
Theta	Θ	θ	Pi	Π	π	Omega	Ω	ω

Standard Abbreviations and Symbols for Units

Symbol	Unit	Symbol	Unit
A	ampere	K	kelvin
u	atomic mass unit	kg	kilogram
atm	atmosphere	kmol	kilomole
Btu	British thermal unit	L	liter
C	coulomb	lb	pound
°C	degree Celsius	ly	light-year
cal	calorie	m	meter
d	day	min	minute
eV	electron volt	mol	mole
°F	degree Fahrenheit	N	newton
F	farad	Pa	pascal
ft	foot	rad	radian
G	gauss	rev	revolution
g	gram	s	second
H	henry	T	tesla
h	hour	V	volt
hp	horsepower	W	watt
Hz	hertz	Wb	weber
in.	inch	yr	year
J	joule	Ω	ohm

Mathematical Symbols Used in the Text and Their Meaning

Symbol	Meaning
=	is equal to
\equiv	is defined as
\neq	is not equal to
\propto	is proportional to
\sim	is on the order of
$>$	is greater than
$<$	is less than
\gg (\ll)	is much greater (less) than
\approx	is approximately equal to
Δx	the change in x
$\sum_{i=1}^N x_i$	the sum of all quantities x_i from $i = 1$ to $i = N$
$ x $	the absolute value of x (always a nonnegative quantity)
$\Delta x \rightarrow 0$	Δx approaches zero
$\frac{dx}{dt}$	the derivative of x with respect to t
$\frac{\partial x}{\partial t}$	the partial derivative of x with respect to t
\int	integral